

## PART – I (1) GENERAL ENGLISH

**Direction:** Improve the underlined phrase. If necessary, with the help of given options.

1. If I had not told you, You will not know the truth.  
A. You cannot know  
B. You would not, be knowing  
C. You have known not  
D. You would not have known

**Direction :** Choose the meaning that best suits the following idiom.

2. Be bound up with.  
A. be tied to something for long  
B. be overwhelmed by  
C. be very busy or preoccupied  
D. be uninvolved in

**Direction :** Out of the given alternatives, choose the one which best expresses the meaning of the underlined word.

3. A number of tenants have been evicted for not paying the rent.  
A. pardoned  
B. sent out  
C. excused  
D. thrown out

**Direction :** Complete the sentence given below by choosing the correct form of verb from options that follow.

4. Jim came yesterday. I do not know whether he \_\_\_\_\_ today.  
A. came  
B. will be coming  
C. will have come  
D. shall come

**Direction :** Improve the underlined phrase, if necessary with the help of given options.

5. George was laid to a rest beside his parents.  
A. lied in rest  
B. laid to rest  
C. lay in rest  
D. lied to rest

**Direction :** Identify the phrase in the following sentence that may be erroneous.

6. The training programme(A) / takes a form of(B) / a series of workshops(C)/ for the LDCS and UDSCS(D)  
A. A  
B. B

- C. C  
D. D

7. **Direction :** Choose the expression that best describes the word HOODLUM.

- A. a neighbour who is rather nose-y  
B. a way-side hawker  
C. a violent criminal  
D. a student who hoots and shouts

**Direction :** Choose the word most nearly opposite in meaning to the given word.

8. DUSKY  
A. sharp  
B. bright  
C. wild  
D. near

9. **Direction :** Choose the expression that best describes the word FALLIBLE.

- A. able to concoct stories  
B. that which can be felled easily  
C. able to stitch pieces together  
D. apt to make mistakes or go wrong

**Direction :** Complete the sentence given below by using the correct form of the verb from the options that follow.

10. I do not bother much about money. I \_\_\_\_\_ about it all my life.  
A. have never bothered  
B. bothered  
C. don't bother  
D. will ever bother

## Part - I (2)

1. जिस संज्ञा से पदार्थ में पाए जाने वाले किसी धम

का बोध होता है, उसे क्या कहते हैं?

- A. व्यक्तवाचि संज्ञा  
B. वस्तुवाचि संज्ञा  
C. भाववाचि संज्ञा  
D. तात्त्ववाचि संज्ञा

2. तन्मूलखित में से निम्न-सा युग्म असंगत है?

- A. अन्न - तिल  
B. आचार - वचन  
C. पीना - पाना  
D. नोन - तेल

3. 'विलपपासु' शब्द में निम्न-सा समास है?

- A. द्वंद्व



- B. द्रवगु
- C. तत्पुरुष
- D. बहुव्रीह

4. 'एि तो े नीम चढ़ा' इस िरेला दि लोिोिोक्त

िे सटीि अर्थ िो हदए गए वविल्यों में से चयन

िीजिए :

- A. िरेले िी बेल पर चढ़ना िा नीम िे वक्ष
- B. िरेले और नीम िा संयोग स्वास्य िे ललए हहतिर होना
- C. िरेले और नीम िा रस लमलाना
- D. एि सार् दो या िई दमु ुणों िा होना

5. 'वाक्यं रसात्मिं िाव्यम' अरुंथत र् रसात्मिं वाक्य ही िाव्य है। - िाव्यलक्षण िे ववषय में यह िर्न किस आचायथ िा है?

- A. भामह
- B. पंडित राि िगन्नार्
- C. ववश्वनार्
- D. मम्मट

6. तनमूनललखित में से िौन-सा शबद अधतत्सम है?

- A. आर
- B. अच्छर
- C. अक्षर
- D. अक्ि

7. तनमूनललखित में से 'िामायनी' िा िाव्य रूप क्या माना िाता है?

- A. ििण्िाव्य
- B. चरत िाव्य
- C. ििथिाव्य
- D. महािाव्य

8. 'तपोवन' शबद में िौन सी संधध है?

- A. ववसगथ संधध
- B. स्वर-व्यंिन संधध
- C. व्यंिन संधध
- D. स्वर संधध

- A. बबहारी हहन्दी
- B. पजश्रमी हहन्दी
- C. पहाड़ी हहन्दी
- D. पी हहन्दी

10. उस म ध्वतन िो, जिसिं िंिि न हो सिंिं .

उसे क्या िहते हैं?

- A. शबद

9. िड़ी बोली हहन्दी िी किस उपभाषा िे अंतगस आती है?

- B. वणथ
- C. प्रत्यय
- D. विदुदत

PART – II (1) CURRENT AFFAIRS

1. Who among the following was recently named as "Best Sports Person of India" by the Kolkata Sports Journalists' Club?

- A. Aroon Ghosh
- B. Safiqi Mondol
- C. Arun Lal
- D. Sunil Chhetri

2. Which of the following agency published the 'World Happiness Report'?

- A. UNDP
- B. WHO
- C. United Nations
- D. The World Bank

3. Which of the following 'as the first site where Indus Valley Civilization was discovered?

- A. Amri
- B. Kotdiji
- C. Harappa
- D. Mohenjodaro

4. What is the total geographical area of Seshachalam biosphere reserve?

- A. 3000.6 km<sup>2</sup>
- B. 765.6 km<sup>2</sup>
- C. 4755.9 km<sup>2</sup>
- D. 5520.2 km<sup>2</sup>

5. 'SASHAKT' is a programme launched by the Government of India in July 2018:

- A. for the resolution of stressed assets with PSU Banks.
- B. to provide institutional Credit to marginal farmers in rural areas.
- C. to empower women in rural areas.

D. to ensure Community participation in development projects.

6. Who is the Chairman of Fifteenth Finance Commission?

- A. Ramesh Chand
- B. N.K. Singh
- C. Y.V. Reddy
- D. Ashok Lahiri

7. Match the economists in List-I with the development principles associated with them in List-II.

List - I

- (a) P.C . Mahalanobis
- (b) K.N. Raj
- (c) J.C . Kumarappa
- (d) Verghese Kurien

List - II

- (i) Co-operative model for generating employment and elimination of poverty
- (ii) Strengthening the agricultural sectors
- (iii) Rapid industrialization and strengthening and the public sector
- (iv) Rural industrialization

- A. (a)-(i) ,(b)- (iii),(c)-(iv) ,(d)- (ii)
- B. (a)- (iv) ,(b)- (iii) ,(c)- (ii) ,(d)- (i)
- C. (a)- (ii) ,(b)- (i) ,(c)- (iv) ,(d)- (iii)
- D. (a)- (iii),(b)-(ii) ,(c)- (iv),(d)-(i)

8. Under Koeppen's scheme of classification of climate, which of the following characteristic refers 'Warm Temperate'?

- A. Average temperature of the coldest month is 18°C or higher.
- B. The average temperature of the coldest month of the (mid -latitude) climate years is higher than minus 3°C but below 18°C
- C. Potential Evaporation exceeds precipitation.
- D. Average temperature for all months is below 10°C

9. Which of the following Indigenous people live in the steppes of Russia?

- A. Twareg
- B. Kirghiz
- C. Bushmen
- D. Maasai

10. Who was the Chairperson of the expert Committee set up for formulating a Green National Accounting (GNA) System in 2015?

- A. Partha Dasgupta

- B. Amartya Sen
- C. Knushik Basu
- D. Ashok Gulati

11. Match the Directive Principles in List-II with the Articles from the constitution of India mentioned in List-I.

List - I

- (a) Article 41

- (b) Article 39A

- (c) Article 42

- (d) Article 50

List - II

- (i) Separation of Judiciary from Executive

- (ii) Right to work

- (iii) Just and Human conditions of work and Maternity relief

- (iv) Equal Justice and free legal aid

- A. (a)-(ii),(b)-(iv),(c)-(iii),(d)-(i)
- B. (a)-(i),(b)-(ii),(c)-(iii) ,(d)-(iv)
- C. (a)-(ii),(b)-(i),(c)-(iii) ,(d)-(iv)
- D. (a)-(iv),(b)-(ii),(c)-(i) ,(d)-(iii)

12. Below sea level paddy farming is practiced at which of the following places?

- A. Thanjavur
- B. Kuttanad
- C. Mangalore
- D. The Ziro Valley

13. In which of the following geographical regions Al-Biruni was born in 973?

- A. Tajikistan
- B. Uzbekistan
- C. Turkmenistan
- D. Afghanistan

14. Which one of the following types of climate is experienced in the mountainous region of Himalayas, Andes and Alps?

- A. Polar Climate
- B. The High lands Climate
- C. Tropical Climate
- D. Humid Micro-thermal Climate

15. Who is known as the Architect of Indian Planning?

- A. Sukhamoy Chakravarty
- B. P.C. Mahalanobis
- C. K.N. Raj
- D. John Matthai

16. Which of the following statements refers 'Endemic Species'?

A. Species which are not found after searches of known or likely areas where they may occur.

B. Species with small population may move into the endangered/vulnerable category if the negative factors affecting them continue to operate.

C. Species which are only found in same particular areas usually isolated by natural or geographical barriers.

D. Species whose population has declined to levels from where it is likely to move into the endangered category in the near future if the negative factors continue to operate.

17. Which is the Correct Chronological Order of the following events?

(a) Khilafat Movement

(b) Jalianwala Bagh Massacre

(c) Peasant Movement in Bardoli

(d) Rowlatt Satyagraha

Code:

A. (a), (b), (c), (d)

B. (a), (d), (b), (c)

C. (d), (b), (a), (e)

D. (d), (c), (a), (b)

18. Which among the following is not a part of the Part III of the Constitution of India?

A. Separation of judiciary from executive.

B. No person accused of any offence shall be compelled to be a witness against himself.

C. No person shall be prosecuted and punished for the same offence more than once.

D. Protection against arrest and detention in certain cases.

19. Which of the following day was observed as the 'World Day of Social Justice'?

A. March 20, 2018

B. February 20, 2018

C. January 20, 2018

D. September 20, 2018

20. 'Bhima' is a tributary of which one of the following rivers?

A. Krishna

B. Mahanadi

C. Kavery

D. Godavari

21. That is the minimum number of members required for the introduction of No – confidence motion in Lok Sabha?

A. 75 members

B. 100 members

C. 50 members

D. 150 members

22. Which one of the following gases have higher Global Warming Potential?

A. Carbon dioxide (CO<sub>2</sub>)

B. Nitrous oxide (N<sub>2</sub>O)

C. Methane (CH<sub>4</sub>)

D. Sulfur hexafluoride (SF<sub>6</sub>)

23. The title 'golden pen' awarded to calligraphers at the Mughal court was known as:

A. Ambarin qalam

B. Shireen qalam

C. Roshan qalam

D. Kamtarin qalam

24. The Co-contributory pension scheme, 'Swavalamban' was announced by the Central Government, in the:

A. Union Budget 2008 -09

B. Union Budget 2015 - 16

C. Union Budget 2010- 11

D. Union Budget 2016 - 17

25. Which of the following is not a part of sustainable Development Goal target to be achieved by 2030?

A. Providing free Primary and Secondary Schooling to all boys and girls.

B. Universal Access to a quality higher education.

C. Equal access to affordable vocational training.

D. Fee Higher Education to all.

26. Under which of the following law Will the confession of a co-accused before police authority was allowed to be submitted as evidence against the accused?

A. AFSPA, 1958

B. POTA, 2002

C. UAPA, 1967

D. TADA, 1985

27. Which among, the following deposits, produces the 'basket of eggs' topography?

A. Out wash plains

- B. Fluvio deposits
- C. Drumlins
- D. Glacial deposits

28. Match List – I with List – II and select the correct answer from the code given below :

- |                           |                           |
|---------------------------|---------------------------|
| List – I                  | List – II                 |
| (Events in Buddha’s Life) | (Symbolic representation) |
| (a) Birth                 | (i) Bodhi Tree            |
| (b) Enlightenment         | (ii) Chakra               |
| (c) First sermon          | (iii) Elephant            |
| (d) Demise                | (iv) Stupa                |
- A. (a)-(iv) ,(b)-(ii),(c)-(i),(d)-(iii)  
 B. (a)-(iii) ,(b)-(i),(c)-(ii),(d)-(iv)  
 C. (a)-(iii) ,(b)-(iv),(c)-(ii),(d)-(i)  
 D. (a)-(ii),(b)-(i) ,(c)-(iii),(d)-(iv)

29. Which among the following won the ‘Oscar’ for the best picture at the 2018 Academy awards?

- A. Dunkirk
- B. All the Money in the World
- C. Darkest Hour
- D. The Shape of Water

30. The duration of panchayat is:

- A. for five years from the date of announcement of results.
- B. for five years from the date of notification of elections.
- C. for five years from the date appointed for its first meeting.
- D. for five years from the date of dissolution of the last panchayat.

31. Who among the following was the author of the novel ‘The Woman in the window’ published in 2018?

- A. Krishin Hannah
- B. Laura Marshall
- C. A .J. Finn
- D. Tara Westover

32. Keystone species are:

- A. Community at the equilibrium state with the environment.
- B. Species that have significant effect on energy flow and structure of their Communities.
- C. Species that influences its Community by creating, modifying, or maintaining physical habitat for itself and other species.

D. Species that arrive to inhabit areas first where no life existed earlier.

33. When there is a Prolonged period of Inadequate rainfall marked with mal-distribution of the same over time and space called as:

- A. Agricultural Drought
- B. Meteorological Drought
- C. Hydrological Drought
- D. Ecological Drought

34. Which state of India launched “Aahar”, a scheme for providing subsidised food to Urban poor?

- A. Delhi
- B. Rajasthan
- C. Odisha
- D. Uttar Pradesh

35. Match List – I and List – II and select the correct answer using the codes given below:

- |                      |                      |
|----------------------|----------------------|
| List – I             | List – II            |
| (a) Jahaz Mahal      | (i) Tamil Nadu       |
| (b) Angh Palace      | (ii) West Bengal     |
| (c) Writers Building | (iii) Madhya Pradesh |
| (d) Fort St. George  | (iv) Nagaland        |
- A. (a)-(ii),(b)-(iii),(c)-(iv) ,(d)- (i)  
 B. (a)- (iv),(b)-(iii) ,(c)- (i) ,(d)- (ii)  
 C. (a)- (iii),(b)-(iv) ,(c)- (ii) ,(d)-(i)  
 D. (a)- (ii),(b)-(iii) ,(c)- (i),(d)-(iv)

36. The Chola temple of Chidambaram belongs to which of the following religious group?

- A. Alvars
- B. Jaina
- C. Nayanars
- D. Vedic

37. In the 2018 Asian games the Gold medal in Men’s shot put was won by:

- A. Muhammad Anas Yahya
- B. Neeraj Chopra
- C. Tejinder Pal Singh Toor
- D. Dharun Ayyasami

38. Suryashakti Kisan Yojana (SKY) to promote generation of Solar energy by farmers is an initiative of which of the following state government?

- A. Madhya Pradesh
- B. Uttar Pradesh
- C. Rajasthan

D. Gujarat

39. Which among the following Women's team was the Champion in the World Table Tennis Championships of 2018?

- A. India
- B. Russia
- C. China
- D. Japan

40. Which among the following is largest fresh water lake in India?

- A. Ladoga
- B. Malawi
- C. Reindeer
- D. Wooler


### PART – II (2) REASONING ABILITY

1. In a code language the word 'TRIP' is denoted as 'QJSU'. The word corresponding to code 'LSPD' is :

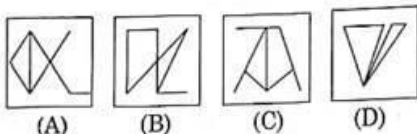
- A. ROCK
- B. CORK
- C. PORK
- D. RUCK

2. Find out the answer figure in which the question figure is embedded/hidden.

Question Figure :



Answer Figure :



- A. (A)
- B. (B)
- C. (C)
- D. (D)

3. A statement is given followed by four conclusions as alternatives. Without resolving anything yourself, choose the conclusion which logically follows from the given statement.

Statement : Most toys in that shop are expensive.

Conclusions:

A. Only Japanese toys in that shop are expensive.

- B. There are cheap toys also in that shop.
- C. There are no cheap toys available in that shop.
- D. Some toys in that shop are expensive.

4. Choose the correct option from the given ones which will complete the series. CXDW, EVFU, GTHS, IRJQ, ?

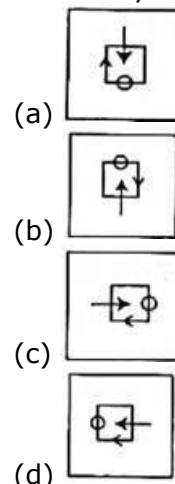
- A. KPJM
- B. KMIN
- C. KPLO
- D. KQNR

5. Complete the given series :

4, 6, 9,  $13\frac{1}{2}$ , ?

- A.  $22\frac{3}{4}$
- B.  $20\frac{1}{4}$
- C.  $18\frac{1}{2}$
- D.  $17\frac{1}{2}$

6. Select the one which is different in some way.



- A. (a)
- B. (b)
- C. (c)
- D. (d)

7. Pointing to a boy, Shashi says, 'He is the son of my grandfather's only child.' How is the boy related to Shashi?

- A. Brother
- B. Cousin
- C. Uncle
- D. Aunt



8. Which one of the given responses would be a dictionary order of the following words?

- (a) Epitaph (b) Epilogue  
(c) Epigraph (d) Epithet  
(e) Epileptic

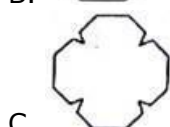
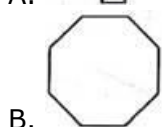
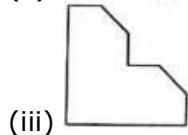
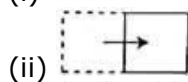
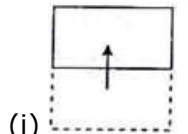
Code:

- A. (c), (e), (b), (d), (a)  
B. (c), (e), (b), (a), (d)  
C. (b), (c), (e), (d), (a)  
D. (e), (b), (a), (c), (d)

9. Select the one which is different from other three groups of letters in some respect.

- A. DHLP  
B. MQUY  
C. JNRV  
D. TYDI

10. A square sheet of paper is folded and punched. Select the figure from the given ones which most closely resembles with the unfolded position:



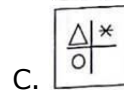
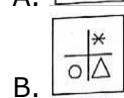
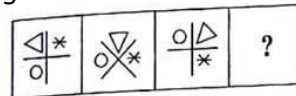
11. Select the correct option which is related to the third term in the same way as second term is related to the first:  
KCA : HBE :: EBH : ?

- A. CBM  
B. CGE  
C. BCM  
D. CBE

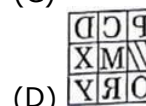
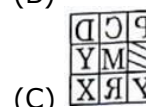
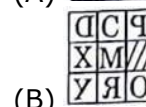
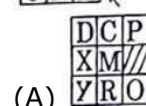

12. If  $84 + 29 = 15$  and  $52 + 16 = 10$ , following the same logic the value of  $83 + 25$  is:

- A. 17  
B. 13  
C. 9  
D. 12

13. Choose the correct option from the given ones which will complete the series.



14. Which of the answer figures marked (A), (B), (C) and (D) is exactly the mirror image of the main (given) figure :



- A. (A)  
B. (B)  
C. (C)  
D. (D)

15. Study the following table regarding maize production in lakh tonnes in 5

states of India and answer the question that follows:

Year State	2012-13	2013-14	2014-15	2015-16
(A)	23.2	19.6	24.5	26.0
(B)	18.6	18.6	20.6	25.4
(C)	28.4	25.6	26.4	25.8
(D)	20.9	28.6	23.4	27.6
(E)	19.8	20.2	22.4	26.3

In which state the production of maize has been continuously increasing every year?

- A. (B)
- B. (C)
- C. (D)
- D. (E)

16. Four groups of numbers are given. One of them is different from others on some basis. Identify it.

- A. 12, 24, 48, 36
- B. 8, 16, 32, 24
- C. 15, 30, 60, 45
- D. 9, 18, 45, 27

17. In a family there are four sisters. Among them Navnoor is younger to Manvi but older than Toshana. Sadhika is older than Toshana but younger than Navnoor. The oldest one is allotted no. 1 and no. 4 is allotted to the youngest. Who is number 2 among them?

- A. Toshana
- B. Sadhika
- C. Manvi
- D. Navnoor

18. An address is presented below. Find EXACTLY SAME from the given alternatives.

Mr A . Acharyulu  
38 Triplican  
Bhubaneshwar - 560065

- A. Mr. A Acharyulu
- B. Mr A . Acharyulu
- C. Mr A . Acharyulu
- D. Mr A . Acharyulu

19. What is the price of the ball?

Statement (I): Total Price of the hockey stick and the ball is 650 .

Statement (II): Price of the hockey sticks is ` 20 more than twice the cost of the ball.

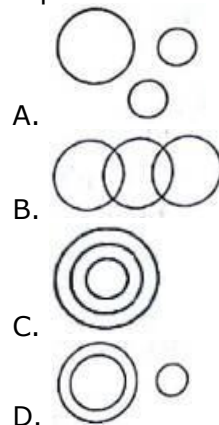
A. Data in statement (I) alone is sufficient to answer the question.

B. Data in statement (II) alone is sufficient to answer the question.

C. Data in both the statements is necessary to answer the question.

D. Data in statements (I) and (II) is not sufficient to answer the question.

20. Which of the following diagram represents Thief, Police and Criminal?



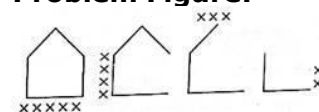
21. Insert the missing number:

821	(40)	779
875	(42)	889
?	(44)	999

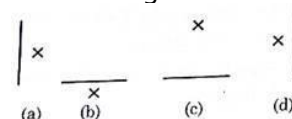
- A. 919
- B. 929
- C. 937
- D. 947

22. There are two sets of figures. One is problem Figure while the other is Answer Figure. Find out which one of the answer figure would occupy the next position in the problem figure if they continue in the same order.

**Problem Figure:**



**Answer Figure :**



- A. (a)
- B. (b)
- C. (c)
- D. (d)

23. A Cube is coloured blue on all the faces. It is then cut into 64 smaller cubes. These cubes are now separated. The

number of smaller cubes with no surface coloured is:

- A. 4
- B. 8
- C. 16
- D. 12

24. Select the correct option which is related to the third term in the same way as second term related to the first:

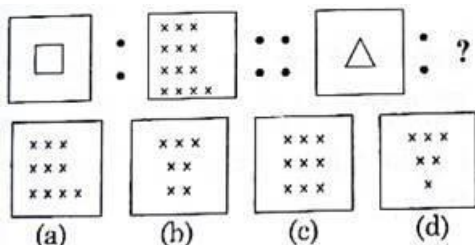
1 2 3 4 : 24 :: 3 1 5 4 : ?

- A. 44
- B. 60
- C. 35
- D. 54

25. George goes 4 km towards East from the school. He turns to the right and walks 3 km. Again takes a turn to the right and walks 2 km to reach his house. In which direction George's house is located from school?

- A. South-East
- B. East
- C. North
- D. North-West

26. Select the correct option which is related to the third term in the same way as second term related to the first.



- A. (a)
- B. (b)
- C. (c)
- D. (d)

27. Five ladies A, B, C, D, E are sitting in a line facing south. Five men L, M, N, O, P are sitting in a line parallel to above line facing north.

- (i) A and L are diagonally opposite to each other.
- (ii) M is at one end of line.
- (iii) D is just to the left of E and is opposite to O.
- (iv) P is just to the left of M and is opposite to B.
- (v) E is opposite to N who is just right to L.

Which man is sitting in the middle of his line?

- A. L
- B. O
- C. P
- D. N

28. In a queue P is standing 15th from the front and Q is standing 21st from the last. R is standing between P and Q. There are 7 students between P and R whereas there are 6 students between R and Q. Total number of students in the queue is:

- A. 48
- B. 49
- C. 50
- D. 51

29. Jayati travels 12 km to the North, turns left and travels 6 km, and then again turns right and covers another 7 km and then turns right and travels another 6 km. How far is she from the starting point?

- A. 25 km
- B. 13 km
- C. 18 km
- D. 19 km

30. Six years ago Dhruv was twice of his sister Reema in age. If the ratio of their present ages is 4: 3. What is Reema's present age?

- A. 15 years
- B. 12 years
- C. 9 years
- D. 6 years

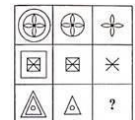
31. Select the option that is related to the third term in the same way as the second term is related to the first term:

Tennis : Court :: Cricket : ?





- A. Ring
- B. Ground
- C. Pitch
- D. Stadium

32. Study the figures in given matrix and findout the answer figure which completes the problem figure matrix.

Problem Figure:



Answer Figure :

- A. 
- B. 
- C. 
- D. 

33. Consider the given statements to be true even if they seem to be at variance from commonly known facts and decide which of the conclusions logically follow(s) from the given statements?

Statements :

(A) All pens are books.

(B) All erasers are books.

Conclusions :

(I) Some pens are erasers.

(II) Some books are pens.

A. Only conclusion (I) follows.

B. Only conclusion (II) follows.

C. Both conclusions (I) and (II) follow.

D. Neither conclusion (I) nor (II) follows.

34. Select the one which is different from the other three alternatives:

A. Link

B. Bond

C. Hook

D. Connect

35. In a code language PRINT is written as RQGOS. How will DREAM be written as, in the same code language?

A. FQCBL

B. EIGBN

C. CPGBL

D. FTGCO

36. A word is given. It is followed by four other words. One out of the four words cannot be formed by using the letters of given word. Find that word.

AUTOGRAPHS

A. ROUGH

B. GRAPH

C. PATHOS

D. GREAT

37. Ravi and Mohan are good in Hockey and Volleyball. Sachin and Ravi are good in Cricket and Baseball. Gaurav and Mohan are good in Hockey and Volleyball.

Sachin, Gaurav and Michael are good in Football and Baseball. Who are good in Hockey and Volleyball?

A. Ravi, Mohan and Sachin

B. Ravi, Mohan and Gaurav

C. Mohan, Gaurav and Michael

D. Gaurav, Sachin and Mohan

38. If  $24 = 72$  and  $53 = 152$  then the value of 36 is:

A. 243

B. 225

C. 326

D. 189

39. On which day of the week did 6th September 1996 fall?

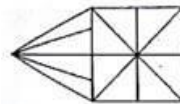
A. Wednesday

B. Friday

C. Sunday

D. Tuesday

40. How many triangles are there in the given figure?



A. 16

B. 21

C. 26

D. 28

## PART - II (3) TEACHING METHODOLOGY

1. When a teacher sets a task that is above the student's current ability level, she is likely to:

A. repeat the same content a number of times.

B. create a communication barrier.

C. generate interest and motivation among children.

D. minimize the effect of noise.

2. Which of the following is a better strategy for teaching children with special needs?

A. Discussion in the class room involving maximum number of students.

B. Demonstration by teacher involving students.

C. Cooperative learning and peer tutoring

D. Ability grouping for teaching

3. 'People's beliefs about their capabilities to produce designated level of

performance that exercise influence over events that affect their lives' are known by the term

- A. self Concept
- B. self Worth
- C. self Esteem
- D. self Efficacy

4. Insight may be defined as:

- A. a form of Intuition closely related to instinct.
- B. a systematic application of the scientific method to the solution of a problem.
- C. a sudden reorganization of experience
- D. a form of inspiration involved in creativity.

5. An indigenous teaching aid is not

- A. costly
- B. made of material from faraway place
- C. locally developed
- D. relevant

6. Spearman's theory of intelligence is to Thorndike's as:

- A. qualitative is to quantitative
- B. culture-free is to culture fair
- C. innate is to acquired
- D. verbal is to performance

7. Which one of the following cannot be a Criterion while designing curriculum?

- A. Educational level of parents
- B. Performance of learners in last examination
- C. Abilities of the learners
- D. Aspirations of the learners

8. The "law of effect" implies:

- A. Learning or non-learning of a response is related to the satisfaction it provides.
- B. extrinsic rewards must be applied for right responses.
- C. for learning to take place the learner must have a motive and a goal clearly recognized.
- D. extrinsic punishment must be applied for wrong responses.

9. The Information and Communication Technology (ICT) has not been able to gain momentum in Indian rural schools because:

- A. In rural areas there is power failure most of the time.

B. Rural population has not a very favourable mindset for ICT.

C. ICT is a costly affair.

D. ICT involves complex terminology.

10. The training courses for special education are regulated by:

- A. National Council of Teacher Education
- B. National Council of Educational Research and Training
- C. Ministry of Social Defence
- D. Rehabilitation Council of India

11. Slapping and Spanking children is not considered appropriate for disciplining children. Which of the following technique/s would you recommend as an alternative to harsh punishment?

- (i) Time-out
  - (ii) Withdrawal of privileges
  - (iii) Modelling
- A. (i) only
  - B. (ii) Only
  - C. (i) and (ii)
  - D. (i),(ii) and (iii)

12. According to PVD Act, 1995, a person with disability is one who suffers from not less than \_\_\_\_\_% of any disability as identified by a medical authority.

- A. 40%
- B. 30%
- C. 50%
- D. 60%

13. What is the greatest obstacle in inclusion?

- A. Social barriers
- B. Wastage of time in Communication
- C. Misunderstanding
- D. Physical Barriers

14. Which is the most important skill to promote effective communication?

- A. Risk taking
- B. Quick responding
- C. Active listening
- D. Non-verbal cues

15. The IEDC (Integrated Education for the Disabled) was first launched during:

- A. 1960s
- B. 1970s
- C. 1980
- D. 1990

16. If a student in your class is comfortable using his/her left hand what would you do as a teacher?

- A. Discourage him to use his/her left hand
- B. Ignore it
- C. Seek medical help
- D. Allow him to use hand according to his/her preference

17. A child with visual impairment maximizes learning with the help of

- A. tactile inputs
- B. kinaesthetic system
- C. auditory system
- D. learning aids

18. Combining computing, telecommunication and media in a digital atmosphere is referred to as:

- A. online communication
- B. integrated media
- C. chat-room
- D. convergence

19. Learning by doing and experiencing the consequences of your actions is

- A. operant conditioning
- B. vicarious learning
- C. enactive learning
- D. problem solving

20. The main argument in favour of the textbooks is:

- A. Textbooks are easily available.
- B. Textbooks help in developing creativity of the learners.
- C. Textbooks ascertain a minimum of authentic content to be covered by the learners.
- D. Textbooks cost less.

21. In which of the following curricular approaches, the learner enjoys maximum autonomy?

- A. Subject centred approach
- B. Teacher Centred approach
- C. Activity Centred approach
- D. Experience Centred approach

22. The main objective of Continuous and Comprehensive Evaluation (CCE) is \_\_\_\_\_.

- A. help teacher complete the course
- B. lay emphasis on thought process and de-emphasize memorisation
- C. satisfy parents with childrens' progress

D. help authorities monitor school functioning

23. A child with impairment may experience disability when

- A. he/she is reprimanded for incomplete tasks.
- B. his/her performance at a task is not appreciated by teacher in the class.
- C. he/she is functioning in an environment that impacts child's successful performance at a task.
- D. he/she is constantly compared to other children who perform well in certain tasks.

24. What is the name of the process of making value judgments based on quantitative/qualitative data collected over a period of time?

- A. Examination
- B. Measurement
- C. Assessment
- D. Evaluation

25. In a selection test pass outs of different boards are competing. What is the best technique to interpret their Scores on achievement?

- A. Medians of respective boards
- B. T Score
- C. t test
- D. Range of respective boards

26. Students with low sense of self-efficacy attribute their poor performance to:

- A. lack of ability
- B. lack of effort
- C. misunderstanding of directions
- D. not studying effort

27. When a student can correctly categorize a geometrical shape, she/he demonstrates:

- A. declarative knowledge
- B. self-regulatory knowledge
- C. procedural knowledge
- D. conditional knowledge

28. Which of the following resources has maximum scope of social development of learners

- A. Museum
- B. Laboratories
- C. Community
- D. Library

29. While teaching as per a lesson plan, generally teachers give least weightage to:

- A. Testing previous knowledge
- B. Motivatory questions
- C. Presentation
- D. Blackboard writing

30. Adjusting assessments, materials, curriculum or classroom environment to accommodate a student's need so that s/he can participate in and achieve the teaching/learning goals is known as:

- A. adaptation
- B. assimilation
- C. modification
- D. Individualized Education Programme

31. A teacher makes a conscious effort to behave in an acceptable manner with the expectation that the students will respond similarly. Which of the following principle explains teacher's behaviour?

- A. Shaping
- B. Modelling
- C. Cueing
- D. Reinforcement

32. Which one of the following is used to encourage students' interaction?

- A. Language games
- B. Drama
- C. Debate
- D. Music

33. In order to be of maximum effectiveness the reinforcement of a given response must:

- A. follow immediately upon the response.
- B. precede rather than follow the response.
- C. be of maximum strength.
- D. involve simultaneous reward of correct responses and punishment of incorrect ones.

34. A Unit of teaching can have

- A. only one chapter
- B. only one concept
- C. several chapters
- D. one chapter with one concept only

35. Who is credited for giving a curricular model?

- A. Ausubel
- B. Hilda Taba

- C. Piaget
- D. Guilford

36. Which of the following are being needs' in Maslow's (1970) hierarchy of needs?

- (i) esteem needs
- (ii) cognitive needs
- (iii) aesthetic needs
- (iv) love and belongingness

Code:

- A. (i) and (iii)
- B. (ii) and (iii)
- C. (i) and (iv)
- D. (i), (iii) and (iv)

37. The first satellite for serving the education sector is:

- A. EDUSAT
- B. INSAT - B
- C. TNSAT- C
- D. SATEDU

38. The central ideals in constructivist views of learning is/are:

- (i) Learners are active in constructing their own knowledge
- (ii) Prior knowledge and beliefs of students are key inputs
- (iii) Teachers have deep conceptual knowledge
- (iv) Social interactions are important in knowledge construction

- A. (i) and (ii)
- B. (i) and (iv)
- C. (i), (ii) and (iii)
- D. (i), (ii) and (iv)

39. Which of the following is not a developmental disorder?

- A. dyslexia
- B. Autistic spectrum Disorder
- C. ADHD
- D. cerebral palsy

40. Summative assessment is not usually used for:

- A. Remediation
- B. Awarding grades
- C. Promotion to next grades
- D. Classification

#### **Computer Literacy: -**

1. All data in the computer system is represented as\_\_\_\_\_.

- A. only two numbers - 0 and 1
- B. numbers and alphabets



C. numbers, alphabets and symbols like =, -, \*, \$ etc.

D. numbers and alphabets of all languages that appear on the keyboard

2. Which of the following tasks is possible in slide show of MS PowerPoint?

(a) Browsing a website

(b) Playing a Youtube video

(c) Preparing result of the class

A. (a) and (b) only

B. (b) and (c) only

C. (a) and (c) only

D. (a), (b) and (c)

3. The numeric data entered in the worksheet (MS Excel) is \_\_\_\_\_aligned by default.

A. Centre

B. Left

C. Right

D. Top

4. \_\_\_\_\_ is used to carry digital data on analog lines.

A. Multiplexer

B. Modulator

C. Modem

D. Demodulator

5. VGA is :

A. Volatile Graphics Array

B. Video Graphics Adapter

C. Video Graphics Array

D. Visual Graphics Array

6. Which of the following tasks can be done Using MS Excel?

(a) Preparing students' result

(b) Storing names of Indian classical singers with the Gharana

(c) Playing music video

A. (a) and (b) only

B. (b) and (c) only

C. (a) and (c) only

D. (a), (b) and (c)

7. Devices that enter information into the computer and communicate with it are called \_\_\_\_\_ devices.

A. Output

B. Input

C. Hardware

D. Storage

8. Which of the following Options contains extensions of MS-Office files?

A. xlsx, docx, pdfx

B. xlsx, docx, pptx

C. xis, doc, pdf

D. ppt, doc, pdf

9. A disruptive program that spreads from program to program or from disk to disk is known as a \_\_\_\_\_.

A. Time bomb

B. Trojan horse

C. Virus

D. Time - related bomb sequence

10. Action of using the mouse to move an item on computer screen to a new location is called:

A. Copy and Paste

B. Cut and Paste

C. Drag and Drop

D. Plug and Play