

Constable (GD) in CAPFs, NIA, SSF and Rifleman (GD) in Assam Rifles Examination, 2018

Roll No. :	
Registration No.	
Name :	
Exam Venue :	iON Digital Zone iDZ Kandrika
Exam Time :	9:00 AM - 10:30 AM
Exam Date :	11/02/2019

Section : General Section

Q.1 Identify the odd one from the following.

- Ans
- 1. LKJI
 - 2. QRSP
 - 3. ZYXW
 - 4. DCBA

Question ID : 9895802401
Chosen Option : 2

Q.2 Select the figure that will come next in the following series.



- Ans
- 1.
 - 2.
 - 3.
 - 4.

Question ID : 9895802418
Chosen Option : 2

Q.3 Select the option that is related to the third number in the same way as the second number is related to the first number.

11 : 169 :: 18 : _____

- Ans 1. 256
 2. 361
 3. 396
 4. 400

Question ID : 9895802414
 Chosen Option : 2

Q.4 Choose the alternative which most closely resembles the mirror image of the given word when mirror is placed at XY line.



- Ans 1. ECA
 2. EJA
 3. ACE
 4. EJA

Question ID : 9895802421
 Chosen Option : 4

Q.5 Choose the option figure in which the problem figure is hidden/embedded. (Rotation is not allowed)



- Ans 1.
- 2.
- 3.
- 4.

Question ID : 9895802420
 Chosen Option : 1

Q.6 Five students took part in a cycling competition. Robert finished before Monish but behind Gunjan. Anil finished before Sunil but behind Monish. Who won the competition?

- Ans 1. Robert

- 2. Anil
- 3. Gunjan
- 4. Monish

Question ID : 9895802409
Chosen Option : 3

Q.7 In the following number series, two numbers have been put within brackets. Study the series carefully and select the correct alternative with respect to the series.

4, 6, 10, (12), 16, (14), 22

Ans 1. Both the bracketed numbers are incorrect.

2. Both the bracketed numbers are correct.

3.

The first bracketed number (from the left) is incorrect and the second is correct.

4.

The first bracketed number (from the left) is correct and the second is incorrect.

Question ID : 9895802417
Chosen Option : 1

Q.8 Six offices on a floor are allotted to A, B, C, D, E and F, respectively. The offices are arranged in two rows, one facing the north and the other facing the south. B got a north-facing office and is not next to D. D and F got diagonally opposite offices. C, whose office is next to F, got a south-facing office, and E got a north-facing office.

Which of the following combinations got south-facing offices?

Ans 1. BED

2. FCA

3. ABC

4. FAE

Question ID : 9895802408
Chosen Option : 2

Q.9 Five students are standing in a line. Suman is standing next to Pranav but not next to Deena. Kumar is standing next to Raju, who is standing on the extreme left, and Deena is not standing next to Kumar. Who is standing in the middle?

Ans 1. Raju

2. Kumar

3. Suman

4. Deena

Question ID : 9895802407
Chosen Option : 2

Q.1 Identify the number that DOES NOT belong to the following series.

2, 9, 28, 64, 126, 217, 344, 513

Ans 1. 28

2. 513

3. 64

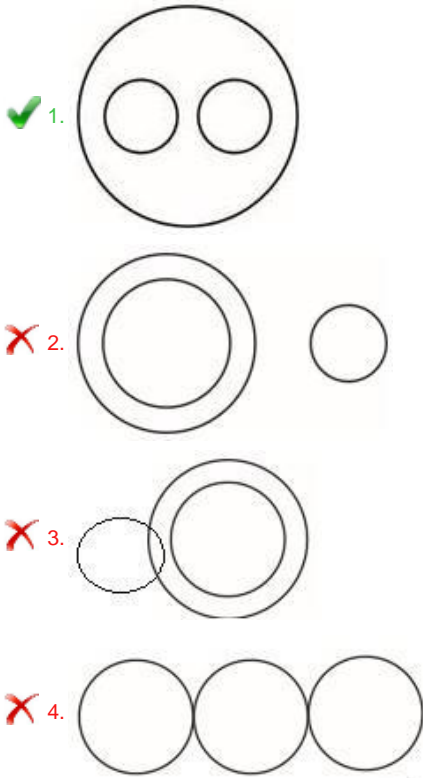
4. 344

Question ID : 9895802413
Chosen Option : 2

Q.1 Select the Venn diagram that best illustrates the relationship between the three given classes.
1

School, Teacher, Student

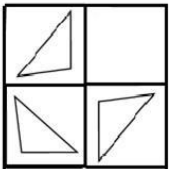
Ans



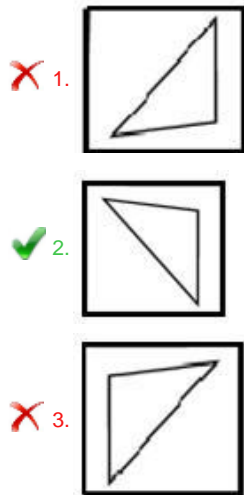
Question ID : 9895802423
Chosen Option : 1

Q.1 Select the option figure which when placed in the blank space of the problem figure would complete the pattern.
2

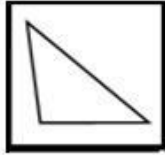
Problem figure:



Ans



4.



Question ID : 9895802419
Chosen Option : 2

Q.1 The statements below are followed by two conclusions labeled I and II. Assuming that the information in the statements
3 is true, even if it appears to be at variance with generally established facts, decide which conclusion(s) logically and definitely follow(s) from the information given in the statements.

Statements:

Some dolls are flowers.

No trees are dolls.

Conclusions:

I. No dolls are trees.

II. Some flowers are trees.

- Ans 1. Both conclusions I and II follow.
 2. Only conclusion II follows.
 3. Only conclusion I follows.
 4. Neither conclusion I nor conclusion II follows.

Question ID : 9895802411
Chosen Option : 2

Q.1 Identify the odd pair from the following.
4

- Ans 1. Italy : Rome
 2. Greece : Athens
 3. Iraq : Dinar
 4. Egypt : Cairo

Question ID : 9895802402
Chosen Option : 2

Q.1 Identify the odd one from the following.
5

- Ans 1. Above
 2. Down
 3. Up
 4. Large

Question ID : 9895802400
Chosen Option : 1

Q.1 Select the number that will come next in the following series.
6

1, 3, 5, 11, 21, 43, 85, 171, _____

- Ans 1. 341

2. 342

3. 247

4. 354

Question ID : 9895802412
Chosen Option : 2

Q.1 Select the letter that will come next in the following series.

O, R, U, X, A, _____

Ans 1. B

2. E

3. C

4. D

Question ID : 9895802399
Chosen Option : 4

Q.1 Which of the four changes given in the options would make the following equation correct?

$$30 \times 3 - 3 = 13$$

Ans 1. \times changed to $+$; $-$ changed to \div

2. \times interchanged with $-$

3. \times interchanged with $-$; 3 interchanged with 30

4. \times changed to \div ; $-$ changed to $+$

Question ID : 9895802416
Chosen Option : 4

Q.1 Identify the number that is different from the rest.

Ans 1. 121

2. 252

3. 196

4. 256

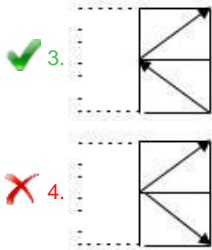
Question ID : 9895802415
Chosen Option : 2

Q.2 A square transparent sheet with a pattern is given. Select from among the four alternatives how the pattern would appear when the transparent sheet is folded at the dotted line.



Ans 1.

2.



Question ID : 9895802422
Chosen Option : 2

Q.2
1 Select the option that is analogous to the given pair.

CD : HI

- Ans
- 1. KL : NO
 - 2. PQ : UV
 - 3. IJ : MN
 - 4. AB : XY

Question ID : 9895802403
Chosen Option : 4

Q.2
2 If D = 4 and G = 7, then GARDEN = _____.

- Ans
- 1. 40
 - 2. 50
 - 3. 49
 - 4. 47

Question ID : 9895802405
Chosen Option : 3

Q.2 Select the option that is related to the third term in the same way as the second term is related to the first term.

3 Bull : Cow :: Lion : _____

- Ans
- 1. Doe
 - 2. Lioness
 - 3. Cub
 - 4. Mare

Question ID : 9895802404
Chosen Option : 2

Q.2
4 If CHILDREN is coded as LIHCNERD, then MOVEMENT will be coded as _____.

- Ans
- 1. EVOMTMEN
 - 2. TNEMEVOM
 - 3. EVOMMENT
 - 4. EVOMTNEM

Question ID : 9895802406
Chosen Option : 3

Q.2
5

Read the given statements and conclusions carefully and decide which of the conclusions logically follow(s) from the statements.

Statements:

All scientists working in Japan are talented.

Some Chinese scientists are working in Japan.

Conclusions:

I. No Chinese scientist is talented.

II. Some talented Chinese scientists are working in Japan.

III. All talented scientists are Japanese.

IV. Some Chinese scientists are talented.

- Ans**
1. Only conclusion III and IV follow.
 2. Only conclusion II follows.
 3. Only conclusion II and IV follow.
 4. Only conclusion I follows.

Question ID : 9895802410
Chosen Option : 2

Q.2
6 _____ is the smallest state of India.

- Ans**
- ✓ 1. Goa
 - ✗ 2. Sikkim
 3. Punjab
 4. Tripura

Question ID : 9895802970
Chosen Option : 1

Q.2
7 In which of following locations did the 1920 Indian National congress take place?

- Ans**
1. Thiruvananthapuram
 2. Tripura
 - ✗ 3. Mumbai
 - ✓ 4. Nagpur

Question ID : 9895802974
Chosen Option : 3

Q.2
8 The green pigment present in leaves is called _____.

- Ans**
1. chlorophyll
 2. phloem
 - ✗ 3. tissue
 4. xylem

Question ID : 9895802966
Chosen Option : 1

Q.2
9 The chemical name of table salt is _____.

- Ans
1. hydrogen chloride
 2. sodium hydrogen carbonate
 3. sodium chloride
 4. sodium carbonate

Question ID : 9895802965
Chosen Option : 4

Q.3
0 The Soviet Union broke down in the year _____.

- Ans
1. 1900
 2. 1991
 3. 2000
 4. 1880

Question ID : 9895802963
Chosen Option : 2

Q.3
1 _____ is the first Indian female to win a silver in the Olympics.

- Ans
1. Tanvi Lad
 2. P.V. Sindhu
 3. Saina Nehwal
 4. Arundhati Pantwane

Question ID : 9895802954
Chosen Option : 2

Q.3
2 Jean Jacques Rousseau was a famous _____.

- Ans
1. Doctor
 2. Philosopher
 3. Painter
 4. Monarch

Question ID : 9895802975
Chosen Option : 2

Q.3
3 The book 'India 2020' is written by _____.

- Ans
1. Prasoan Joshi
 2. Pranab Mukherjee
 3. Dr A.P.J Abdul Kalam
 4. Ram Nath Kovind

Question ID : 9895802958
Chosen Option : 3

Q.3
4 On the basis of nominal GDP, India is the world's _____ largest economy in 2018.

- Ans
- 1.

- 2. fifth
- 3. seventh
- 4. tenth

Question ID : 9895802959
Chosen Option : 4

Q.3
5 _____ is also known as 'The Light of Asia'.

- Ans
- 1. Swami Vivekananda
 - 2. Rumi
 - 3. Gandhi
 - 4. Buddha

Question ID : 9895802956
Chosen Option : 2

Q.3
6 Pietra Dura, the inlay technique of architecture can be found in which of the following monuments?

- Ans
- 1. Taj Mahal
 - 2. India Gate
 - 3. Gateway of India
 - 4. Char Minar

Question ID : 9895802976
Chosen Option : 3

Q.3
7 GST stands for _____.

- Ans
- 1. Growth and Service Tax
 - 2. Growth and Sale Tax
 - 3. Goods and Services Tax
 - 4. Goods and Sales Tax

Question ID : 9895802961
Chosen Option : 3

Q.3
8 The famous classical dance style of Tamil Nadu is:

- Ans
- 1. Mohiniyattam
 - 2. Kathak
 - 3. Kuchipudi
 - 4. Bharatanatyam

Question ID : 9895802952
Chosen Option : 3

Q.3
9 The _____ is a bird which symbolises peace.

- Ans
- 1. dove
 - 2. owl
 - 3. peacock

4. crow

Question ID : 9895802957
Chosen Option : 3

Q.4
0 Which of the following is NOT a part of the endocrine system?

- Ans
1. Salivary gland
 2. Thymus
 3. Pineal gland
 4. Adrenal gland

Question ID : 9895802969
Chosen Option : 2

Q.4
1 Lavani is a folk dance form of:

- Ans
1. Bihar
 2. Gujarat
 3. Rajasthan
 4. Maharashtra

Question ID : 9895802953
Chosen Option : 2

Q.4
2 The longest bone in the human body is the _____.

- Ans
1. femur
 2. ulna
 3. radius
 4. tibia

Question ID : 9895802967
Chosen Option : 4

Q.4
3 When did the civil war in Sri Lanka end?

- Ans
1. 1909
 2. 1800
 3. 2009
 4. 2001

Question ID : 9895802964
Chosen Option : 3

Q.4
4 Which if the following statements is correct in the context of Indian Democracy?

- Ans
1. allows people to choose their representatives.
 2. allows people to take over the country in cases of financial emergency.
 3. allows the military to rule the country.
 4. commands people to pay taxes for pilgrimage.

Question ID : 9895802962
Chosen Option : 1

Q.4
5 _____ is the first Indian woman to swim across the English Channel.

- Ans
- 1. Shikha Tandon
 - 2. Sania Mirza
 - 3. Shivani Kataria
 - 4. Aarti Saha

Question ID : 9895802955
Chosen Option : 3

Q.4
6 The river Narmada rises in Madhya Pradesh from the _____.

- Ans
- 1. Satpura range
 - 2. Aravalli hills
 - 3. Amarkantak hills
 - 4. Nilgiri hills

Question ID : 9895802972
Chosen Option : 4

Q.4
7 The _____ is a major iron ore belt in India.

- Ans
- 1. Gujarat-Rajasthan belt
 - 2. Odisha-Jharkhand belt
 - 3. Uttar Pradesh-Bihar belt
 - 4. Tamil Nadu-Chhattisgarh belt

Question ID : 9895802971
Chosen Option : 1

Q.4
8 The attack by the third estate on the Bastille prison sparked the _____.

- Ans
- 1. Break up of Soviet Union
 - 2. French Revolution
 - 3. Russian Revolution
 - 4. The fall of Tsar

Question ID : 9895802973
Chosen Option : 3

Q.4
9 The full form of DNA is:

- Ans
- 1. dyoxyenucleic acid
 - 2. deltanucleic acid
 - 3. deoxyribonucleic acid
 - 4. deoxyribeneutral acid

Question ID : 9895802968
Chosen Option : 4

Q.5
0 _____ is the primary sector of the Indian economy.

- Ans
1. Banking
 2. Judiciary
 3. Information and Technology
 4. Agriculture

Question ID : 9895802960
Chosen Option : 4

Q.5
1 A sum becomes ₹10650 in 5 years and ₹11076 in 6 years at simple interest. What is the sum?

- Ans
1. ₹8740
 2. ₹8946
 3. ₹8520
 4. ₹8800

Question ID : 9895804067
Chosen Option : 2

Q.5
2 If P is 40% less than Q, then Q is how much percentage more than P?

- Ans
1. 66.66%
 2. 60%
 3. 33.33%
 4. 40%

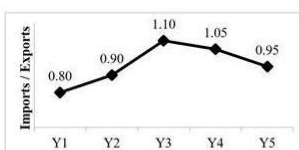
Question ID : 9895804061
Chosen Option : 2

Q.5
3 Anil, Deepak and Dinesh together can complete a work in 35 days. Anil and Dinesh together can complete the same work in 60 days. In how many days Deepak alone can complete the same work?

- Ans
1. 84 days
 2. 96 days
 3. 110 days
 4. 105 days

Question ID : 9895804070
Chosen Option : 2

Q.5
4 The line chart given below shows the ratio of imports to exports for a country for 5 consecutive years Y_1 , Y_2 , Y_3 , Y_4 and Y_5 .



If the exports for year Y_3 is ₹35000 crore, then what will be imports (in crores) for the year Y_3 ?

- Ans
1. ₹38500
 2. ₹35500
 3. ₹43500

4. ₹41500

Question ID : 9895804077
Chosen Option : 2

Q.5 Rajesh goes to his office at the speed of 25 km/hr and returns to his home at the speed of 20 km/hr. If he takes total 9 hours, then what is the distance between his office and home?

- Ans 1. 120 km
 2. 100 km
 3. 90 km
 4. 140 km

Question ID : 9895804072
Chosen Option : 4

Q.5 A alone can complete a work in 6 days and B alone can complete the same work in 8 days. In how many days both A and B together can complete the same work?

- Ans 1. 24/7 days
2. 48/13 days
3. 26/7 days
4. 35/13 days

Question ID : 9895804069
Chosen Option : 2

Q.5 If cost price of an article is ₹220 and profit is 20%, then what will be the selling price of the article?

- Ans 1. ₹256
 2. ₹176
 3. ₹264
 4. ₹216

Question ID : 9895804062
Chosen Option : 1

Q.5 What is the value of $\left[10\frac{1}{3} \div \frac{5}{3}(10 + 14 \div 3 - 1)\right]$?

- Ans 1. $\frac{31}{85}$
 2. $\frac{93}{205}$
 3. $\frac{33}{50}$
 4. $\frac{29}{88}$

Question ID : 9895804056
Chosen Option : 2

Q.5 What is the Highest Common Factor of $2^3 \times 3^5$ and $3^3 \times 5^2$?

Ans

✓ 1. 3^3

✗ 2. $2^1 \times 3^3 \times 5^1$

✗ 3. $3^5 \times 5^2$

✗ 4. $2^3 \times 3^5 \times 5^2$

Question ID : 9895804054

Chosen Option : 1

Q.6 The height of a cone is 16 cm and radius of its base is 30 cm. If the rate of painting it is ₹14/cm², then what will be the total cost in painting the curved surface of cone from outside?

Ans ✓ 1. ₹44880

✗ 2. ₹36820

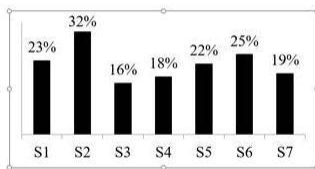
✗ 3. ₹46540

✗ 4. ₹42220

Question ID : 9895804075

Chosen Option : 2

Q.6 The bar chart given below shows the amount of sugar used in making 7 different varieties of sweets S1, S2, S3, S4, S5, S6 and S7 has been shown as a percentage of total weight of the sweet.



The total weight of sweet S4 is 150 kg. What is the amount of sugar used in sweet S4?

Ans 1. 25 kg

2. 27 kg

3. 35 kg

4. 31 kg

Question ID : 9895804078

Chosen Option : 3

Q.6 The length, breadth and height of a room is 21 metres, 12 metres and 16 metres. What will be the length of the largest rod that can be placed in that room?

Ans ✗ 1. 31 metres

✓ 2. 29 metres

✗ 3. 32 metres

✗ 4. 25 metres

Question ID : 9895804074

Chosen Option : 3

Q.6 A bag has ₹420 in the denomination of ₹1, ₹2 and ₹5 coins. The number ₹1, ₹2 and ₹5 coins are in the ratio of 8 : 1 : 5. How many coins of ₹5 are in the bag?

Ans ✗ 1. 24

✗ 2. 12

✓ 3. 60

✗ 4. 48

Q.6
4 $u : v = 4 : 7$ and $v : w = 9 : 7$. If $u = 72$, then what is the value of w ?

- Ans
- 1. 63
 - 2. 49
 - 3. 98
 - 4. 77

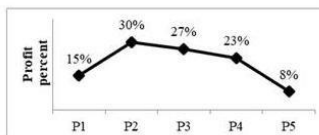
Q.6
5 What is the value of $5\frac{1}{2} - \left[3\frac{1}{4} + 6 - 4 \div 2\right]$?

- Ans
- 1. $\frac{5}{4}$
 - 2. $-\frac{7}{4}$
 - 3. $\frac{7}{4}$
 - 4. $-\frac{5}{4}$

Q.6
6 If the length of the diagonal of a square is $10\sqrt{2}$ cm, then what will be area of the square?

- Ans
- 1. 50 cm^2
 - 2. 100 cm^2
 - 3. $100\sqrt{2} \text{ cm}^2$
 - 4. 200 cm^2

Q.6
7 The line chart given below shows the profit percentage of a company on 5 different products P1, P2, P3, P4 and P5.



The revenue of product P3 is ₹38100. What is expenditure of product P3?

- Ans
- 1. ₹30000
 - 2. ₹32000
 - 3. ₹35000
 - 4. ₹29000

8

- Ans
- 1. ₹5348
 - 2. ₹5525
 - 3. ₹5494
 - 4. ₹5620

Question ID : 9895804059
Chosen Option : 2

Q.6 If Sonu is driving a car at a speed of 20 m/s, then in how much time Sonu will cover a distance of 936 km?
9

- Ans
- 1. 46.8 hr
 - 2. 13 hr
 - 3. 18 hr
 - 4. 21 hr

Question ID : 9895804071
Chosen Option : 1

Q.7 Manish purchased books at the rate of ₹225 per book and sold them at the rate of ₹162 per book. What will be the loss
0 on selling 7 books?

- Ans
- 1. ₹441
 - 2. ₹63
 - 3. ₹315
 - 4. ₹28

Question ID : 9895804063
Chosen Option : 1

Q.7 A sum becomes 5 times of itself in 3 years at compound interest (interest is compounded annually). In how many years
1 will the sum becomes 125 times of itself?

- Ans
- 1. 12
 - 2. 8
 - 3. 6
 - 4. 9

Question ID : 9895804068
Chosen Option : 3

Q.7 The average weight of a group of 22 students increases by 1 kg when the weight of the teacher is also included. If the
2 initial average weight of the group of 22 students was 31 kg, then what is the weight of the teacher?

- Ans
- 1. 54 kg
 - 2. 48 kg
 - 3. 53 kg
 - 4. 57 kg

Question ID : 9895804057
Chosen Option : 2

Q.7 The price of two articles are in the ratio of 3 : 2 respectively. The price of first article is increased by 40% and the price
3 of second article is decreased by $x\%$. If the new ratio of the price of the two articles is 7 : 3 respectively, then what is the value of x ?

- Ans
- 1.

2. 15

3. 30

4. 20

Question ID : 9895804066

Chosen Option : 3

Q.7 A bowler has taken 0, 3, 2, 1, 5, 3, 4, 5, 5, 2, 2, 0, 0, 1 and 2 wickets in 15 consecutive matches.
4

What is the mode of the given data?

Ans 1. 3

2. 0

3. 5

4. 2

Question ID : 9895804060

Chosen Option : 2

Q.7 If the average of five observations a_1, a_2, a_3, a_4 and a_5 is N , then what is the average of five new observations $a_1 - 100, a_2 - 100, a_3 - 100, a_4 - 100$ and $a_5 - 100$?
5

Ans 1. $N - 40$

2. $N - 150$

3. $N - 100$

4. $N - 20$

Question ID : 9895804058

Chosen Option : 2

Section : English Language

Q.1 Select the most appropriate option to substitute the underlined segment in the given sentence. If there is no need to substitute it, select No Improvement.

Mumbai has a lot of heritage structures which badly need restoration.

Ans 1. few of

2. No improvement

3. lot of

4. many of

Question ID : 9895803567

Chosen Option : 4

Q.2 Select the antonym of the given word.

EMANCIPATION

Ans 1. bondage

2. riddance

3. liberty

4. freedom

Question ID : 9895803559

Chosen Option : 2

Q.3 Select the antonym of the given word.

AFFLICTION

- Ans
1. anguish
 2. discomfort
 3. agony
 4. pleasure

Question ID : 9895803560
Chosen Option : 3

Q.4 Select the option that means the same as the following phrase.

One who is outgoing

- Ans
1. extrovert
 2. vagabond
 3. explorer
 4. introvert

Question ID : 9895803564
Chosen Option : 1

Q.5 From the given options, identify the segment in the sentence which contains the grammatical error.

Many students thought that this year's question paper was very tough as compared to last year.

- Ans
1. Many students thought
 2. that this year's
 3. was very tough
 4. compared to last year

Question ID : 9895803544
Chosen Option : 1

Q.6 Select the synonym of the given word.

SUITABLE

- Ans
1. awkward
 2. ideal
 3. appropriate
 4. friendly

Question ID : 9895803557
Chosen Option : 3

Q.7 Select the most appropriate word to fill in the blank.

The judge found him _____ of murder.

- Ans
1. innocent

- 2. honest
- 3. guilty
- 4. criminal

Question ID : 9895803550
Chosen Option : 4

Q.8 Select the option that means the same as the given idiom.

To pay through the nose

- Ans
- 1. To pay excessively
 - 2. To pay reluctantly
 - 3. To pay willingly
 - 4. To pay easily

Question ID : 9895803562
Chosen Option : 3

Comprehension:

In the following passage some words have been deleted. Fill in the blanks with the help of the alternatives given.

Generations of women in the southern Indian state of Tamil Nadu have been diving to _____ (1) seaweed to help support their families _____ (2) women head to the sea on _____ (3) unique quest. Clad in traditional saris and goggles, they _____ (4) into the ocean to collect coral and seaweed _____ (5) grow on underwater rocks. Seaweed is used in food and to make various drugs and chemicals.

SubQuestion No : 9

Q.9 Select the most appropriate option that will fill in the blank number 1.

- Ans
- 1. build
 - 2. collect
 - 3. grow
 - 4. assemble

Question ID : 9895803552
Chosen Option : 2

Comprehension:

In the following passage some words have been deleted. Fill in the blanks with the help of the alternatives given.

Generations of women in the southern Indian state of Tamil Nadu have been diving to _____ (1) seaweed to help support their families _____ (2) women head to the sea on _____ (3) unique quest. Clad in traditional saris and goggles, they _____ (4) into the ocean to collect coral and seaweed _____ (5) grow on underwater rocks. Seaweed is used in food and to make various drugs and chemicals.

SubQuestion No : 10

Q.1
0 Select the most appropriate option that will fill in the blank number 2.

- Ans
- 1. Those
 - 2. These
 - 3. That
 - 4. This

Question ID : 9895803553
Chosen Option : 1

Comprehension:

In the following passage some words have been deleted. Fill in the blanks with the help of the alternatives given.

Generations of women in the southern Indian state of Tamil Nadu have been diving to _____ (1) seaweed to help support their families _____ (2) women head to the sea on _____ (3) unique quest.

Clad in traditional saris and goggles, they _____ (4) into the ocean to collect coral and seaweed _____ (5) grow on underwater rocks. Seaweed is used in food and to make various drugs and chemicals.

SubQuestion No : 11

Q.1
1 Select the most appropriate option that will fill in the blank number 3.

- Ans
- 1. any
 - 2. a
 - 3. an
 - 4. the

Question ID : 9895803554
Chosen Option : 1

Comprehension:

In the following passage some words have been deleted. Fill in the blanks with the help of the alternatives given.

Generations of women in the southern Indian state of Tamil Nadu have been diving to _____ (1) seaweed to help support their families _____ (2) women head to the sea on _____ (3) unique quest.

Clad in traditional saris and goggles, they _____ (4) into the ocean to collect coral and seaweed _____ (5) grow on underwater rocks. Seaweed is used in food and to make various drugs and chemicals.

SubQuestion No : 12

Q.1
2 Select the most appropriate option that will fill in the blank number 4.

- Ans
- 1. swim
 - 2. float
 - 3. fall

✓ 4. dive

Question ID : 9895803555
Chosen Option : 1

Comprehension:

In the following passage some words have been deleted. Fill in the blanks with the help of the alternatives given.

Generations of women in the southern Indian state of Tamil Nadu have been diving to _____ (1) seaweed to help support their families _____ (2) women head to the sea on _____ (3) unique quest.

Clad in traditional saris and goggles, they _____ (4) into the ocean to collect coral and seaweed _____ (5) grow on underwater rocks. Seaweed is used in food and to make various drugs and chemicals.

SubQuestion No : 13

Q.1
3 Select the most appropriate option that will fill in the blank number 5.

- Ans
- 1. what
 - 2. who
 - 3. which
 - 4. whom

Question ID : 9895803556
Chosen Option : 1

Q.1 From the given options, identify the segment in the sentence which contains the grammatical error.

4

He will not be able to attend the school function tomorrow, will you?

- Ans
- 1. to attend
 - 2. will you?
 - 3. the school function
 - 4. will not be

Question ID : 9895803545
Chosen Option : 2

Q.1
5 Select the correctly spelt word.

- Ans
- 1. Receipt
 - 2. Reseipt
 - 3. Recipt
 - 4. Receipt

Question ID : 9895803565
Chosen Option : 4

Q.1 Select the most appropriate option to substitute the underlined segment in the given sentence. If there is no need to substitute it, select No Improvement.

6

The torch fall from his trembling hand and he ran wildly towards the school building.

- Ans
- 1. felled from his trembling hand

- 2. No improvement
- 3. fell from his trembling hand
- 4. falling from his trembling hand

Question ID : 9895803569
Chosen Option : 1

Q.1
7 Select the most appropriate word to fill in the blank.

1950 is _____ year in which India became a republic.

- Ans
- 1. one
 - 2. the
 - 3. a
 - 4. an

Question ID : 9895803548
Chosen Option : 3

Q.1
8 Select the most appropriate option to substitute the underlined segment in the given sentence. If there is no need to substitute it, select No Improvement.

A young taxi driver has claimed that a monster attacked him while he drove along a lonely road.

- Ans
- 1. No improvement
 - 2. as long as he drove
 - 3. while he was driving
 - 4. while he is driving

Question ID : 9895803568
Chosen Option : 3

Q.1
9 Select the correctly spelt word.

- Ans
- 1. Businnes
 - 2. Buisness
 - 3. Business
 - 4. Bussiness

Question ID : 9895803566
Chosen Option : 3

Q.2
0 Select the word which means the same as the group of words given.

One who talks a lot

- Ans
- 1. glutton
 - 2. loquacious
 - 3. gullible
 - 4. taciturn

Question ID : 9895803563
Chosen Option : 3

Q.2
1 Select the option that means the same as the given idiom.

To jump on the bandwagon

- Ans
- 1. To follow popular trends
 - 2. To fall into misfortune
 - 3. To run after the unachievable
 - 4. To take a calculated risk

Question ID : 9895803561
Chosen Option : 4

Q.2
2 Select the most appropriate word to fill in the blank.

Shall we _____ his invitation to dinner.

- Ans
- 1. expect
 - 2. except
 - 3. accept
 - 4. agree

Question ID : 9895803549
Chosen Option : 2

Q.2
3 Select the synonym of the given word.

MAGNIFICENT

- Ans
- 1. grand
 - 2. expensive
 - 3. huge
 - 4. modest

Question ID : 9895803558
Chosen Option : 3

Q.2
4 Select the most appropriate word to fill in the blank.

Let's go out now. It isn't _____ anymore.

- Ans
- 1. raining
 - 2. rained
 - 3. rain
 - 4. rains

Question ID : 9895803547
Chosen Option : 3

Q.2
5 From the given options, identify the segment in the sentence which contains the grammatical error.

The TV anchor insisted on me to participate in the debate.

- Ans
- 1. to participate
 - 2. in the debate

- ✓ 3. insisted on me
✗ 4. The TV anchor

Question ID : 9895803546
Chosen Option : 4

Section : Hindi Language

Q.1 दिये गये वाक्यांश के लिए एक शब्द चुनिए ।

जो जन्म से अंधा हो

- Ans
1. जन्मांध
 2. दुष्टांध
 3. कृपांध
 4. अंधभक्त

Question ID : 9895803436
Chosen Option : --

Q.2 सही वर्तनी वाले शब्द का चयन करें।

- Ans
- ✓ 1. शोकाकुल
 2. शोककुल
 3. शौकाकुल
 4. शौककुल

Question ID : 9895803439
Chosen Option : --

Q.3 दिए गए शब्द के पर्यायवाची शब्द का चयन करें।

अर्जुन

- Ans
1. जगदीश
 2. कोविंद
 3. शमशीर
 4. धनंजय

Question ID : 9895803432
Chosen Option : --

Q.4 रिक्त स्थान को भरने के लिए सबसे उपयुक्त शब्द का चयन करें।

मेरी बस _____ गई थी।

- Ans
1. सो
 - ✗ 2. मर

3. छूट

4. उड़

Question ID : 9895803421
Chosen Option : --

Q.5 रिक्त स्थान को भरने के लिए सबसे उपयुक्त शब्द का चयन करें।

आकाश में _____ चमक रहा है।

Ans

1. सोना

2. बादल

3. तारा

4. चाँदी

Question ID : 9895803420
Chosen Option : --

Q.6 दिए गए वाक्य में रेखांकित खंड को प्रतिस्थापित करने के लिए सबसे उपयुक्त विकल्प का चयन करें।

कन्या की सुपात्रता का मापदंड केवल दहेज के स्वरूप से तय करना जाने लगा है।

Ans

1. स्वरूप से तय करने जाने लगे हैं।

2. स्वरूप से तय करने जाने लगे है।

3. स्वरूप से तय किया जाने लगा है।

4. स्वरूप से तय हुआ जाने लगा है।

Question ID : 9895803417
Chosen Option : --

Q.7 सही वर्तनी वाले शब्द का चयन करें।

Ans

1. मोखिक

2. मौकिख

3. मौखीक

4. मौखिक

Question ID : 9895803438
Chosen Option : --

Q.8 रिक्त स्थान को भरने के लिए सबसे उपयुक्त शब्द का चयन करें।

बूढ़ा आदमी अपने _____ से दुःखी है।

Ans

1. जवानी

2. बचपन

3. प्रशंसा

4. बुढ़ापे

Question ID : 9895803422

Chosen Option : --

Q.9 दिए गए वाक्य में रेखांकित खंड को प्रतिस्थापित करने के लिए सबसे उपयुक्त विकल्प का चयन करें।

गणतन्त्र दिवस की परेड में सैनिक कदम तालें कर रहे हैं।

Ans

1. सैनिक कदमों-ताल कर रहे हैं।
2. सैनिक कदम-ताल कर रहे हैं।
3. सैनिक कदमों तालों कर रहा है।
4. सैनिक कदम तालों कर रहा है।

Question ID : 9895803418

Chosen Option : --

Q.1 रिक्त स्थान को भरने के लिए सबसे उपयुक्त शब्द का चयन करें।

वसंत पंचमी के दिन देवी से _____ की जाती है।

Ans

1. प्रसन्नता
2. आवाहन
3. प्रार्थना
4. पूजा

Question ID : 9895803423

Chosen Option : --

Q.1 दिए गए वाक्य का वह भाग ज्ञात करें जिसमें कोई त्रुटि है।

मोहन ने रुपयों का प्रबन्ध अपनी पत्नी की गहने बेच कर किया।

Ans

1. रुपयों का प्रबन्ध
2. बेच कर किया
3. मोहन ने
4. अपनी पत्नी की गहने

Question ID : 9895803414

Chosen Option : --

Q.1 निम्नलिखित में से उस विकल्प का चयन करें जो 'अंधे के हाथ बटेर लगना' मुहावरे का अर्थ व्यक्त करता है।

Ans

1. सफल होना
2. बिना प्रयास के कीमती वस्तु मिल जाना
3. अयोग्य होना
4. प्रयास से कीमती वस्तु मिलना

Question ID : 9895803435

Chosen Option : --

Q.1
3

दिये गये वाक्यांश के लिए एक शब्द चुनिए ।

जो मोक्ष चाहता हो

Ans

1. मोक्षप्रिय
2. अमोक्षीय
3. मुमुक्षु
4. मोक्षालु

Question ID : 9895803437
Chosen Option : --

Q.1 निम्नलिखित में से उस विकल्प का चयन करें जो 'अंग-अंग ढीला होना' मुहावरे का अर्थ व्यक्त करता है।

Ans

- ✗ 1. हार जाना
2. अत्यधिक थक जाना
3. निराश होना
4. दुखी होना

Question ID : 9895803434
Chosen Option : --

Q.1 दिए गए शब्द का विलोम चुनें।

योग्य

Ans

- ✓ 1. मूर्ख
2. अयोग्य
3. सौभाग्य
4. सुयोग्य

Question ID : 9895803430
Chosen Option : --

Comprehension:

दिए गए अनुच्छेद में कुछ शब्द हटा दिए गए हैं। दिए गए विकल्पों की सहायता से रिक्त स्थान भरें। प्रत्येक संख्या के लिए सबसे उपयुक्त विकल्प का चयन करें।

आज अनेक भाषाओं में अनेक समाचार-पत्र बाजार में उपलब्ध हैं। मनुष्य की _____ (1) विशेषता है उसका _____ (2) होना। रात्रि में वह चैन की नींद सोकर प्रातः काल उठता है तो शीघ्र ही अपने आस-पास के वातावरण के बारे में जानने का _____ (3) करता है। चाय की _____ (4) के साथ देश - विदेश की खबरों को जानने के लिए वह _____ (5) का सहारा लेता है।

SubQuestion No : 16

Q.1 गद्यांश में संकेतित रिक्त स्थान (1) के लिए उपयुक्त शब्द होगा -

- Ans 1. आराम
 2. व्यक्ति
 3. नींद
 4. स्वभावगत

Question ID : 9895803425
Chosen Option : --

Comprehension:

दिए गए अनुच्छेद में कुछ शब्द हटा दिए गए हैं। दिए गए विकल्पों की सहायता से रिक्त स्थान भरें। प्रत्येक संख्या के लिए सबसे उपयुक्त विकल्प का चयन करें।

आज अनेक भाषाओं में अनेक समाचार-पत्र बाजार में उपलब्ध हैं। मनुष्य की _____ (1) विशेषता है उसका _____ (2) होना। रात्रि में वह चैन की नींद सोकर प्रातः काल उठता है तो शीघ्र ही अपने आस-पास के वातावरण के बारे में जानने का _____ (3) करता है। चाय की _____ (4) के साथ देश - विदेश की खबरों को जानने के लिए वह _____ (5) का सहारा लेता है।

SubQuestion No : 17

Q.1
7 गद्यांश में संकेतित रिक्त स्थान (2) के लिए उपयुक्त शब्द होगा -

- Ans 1. जिज्ञासु
 2. संपादक
 3. संकेत
 4. बिक्री

Question ID : 9895803426
Chosen Option : --

Comprehension:

दिए गए अनुच्छेद में कुछ शब्द हटा दिए गए हैं। दिए गए विकल्पों की सहायता से रिक्त स्थान भरें। प्रत्येक संख्या के लिए सबसे उपयुक्त विकल्प का चयन करें।

आज अनेक भाषाओं में अनेक समाचार-पत्र बाजार में उपलब्ध हैं। मनुष्य की _____ (1) विशेषता है उसका _____ (2) होना। रात्रि में वह चैन की नींद सोकर प्रातः काल उठता है तो शीघ्र ही अपने आस-पास के वातावरण के बारे में जानने का _____ (3) करता है। चाय की _____ (4) के साथ देश - विदेश की खबरों को जानने के लिए वह _____ (5) का सहारा लेता है।

SubQuestion No : 18

Q.1
8 गद्यांश में संकेतित रिक्त स्थान (3) के लिए उपयुक्त शब्द होगा -

- Ans 1. प्रयास
 2. अनुभव

✗ 3. खबर

4. प्रतीक्षा

Question ID : 9895803427
Chosen Option : --

Comprehension:

दिए गए अनुच्छेद में कुछ शब्द हटा दिए गए हैं। दिए गए विकल्पों की सहायता से रिक्त स्थान भरें। प्रत्येक संख्या के लिए सबसे उपयुक्त विकल्प का चयन करें।

आज अनेक भाषाओं में अनेक समाचार-पत्र बाजार में उपलब्ध हैं। मनुष्य की _____ (1) विशेषता है उसका _____ (2) होना। रात्रि में वह चैन की नींद सोकर प्रातः काल उठता है तो शीघ्र ही अपने आस-पास के वातावरण के बारे में जानने का _____ (3) करता है। चाय की _____ (4) के साथ देश - विदेश की खबरों को जानने के लिए वह _____ (5) का सहारा लेता है।

SubQuestion No : 19

Q.1 गद्यांश में संकेतित रिक्त स्थान (4) के लिए उपयुक्त शब्द होगा -

Ans

✗ 1. चुस्कियों

✗ 2. बरतन

3. टुकड़ों

4. कपड़ों

Question ID : 9895803428
Chosen Option : --

Comprehension:

दिए गए अनुच्छेद में कुछ शब्द हटा दिए गए हैं। दिए गए विकल्पों की सहायता से रिक्त स्थान भरें। प्रत्येक संख्या के लिए सबसे उपयुक्त विकल्प का चयन करें।

आज अनेक भाषाओं में अनेक समाचार-पत्र बाजार में उपलब्ध हैं। मनुष्य की _____ (1) विशेषता है उसका _____ (2) होना। रात्रि में वह चैन की नींद सोकर प्रातः काल उठता है तो शीघ्र ही अपने आस-पास के वातावरण के बारे में जानने का _____ (3) करता है। चाय की _____ (4) के साथ देश - विदेश की खबरों को जानने के लिए वह _____ (5) का सहारा लेता है।

SubQuestion No : 20

Q.2 गद्यांश में संकेतित रिक्त स्थान (5) के लिए उपयुक्त शब्द होगा -

Ans

1. फिल्मों

✓ 2. समाचार पत्र

3. गानों

4. खेलों

Q.2
1 दिए गए वाक्य का वह भाग ज्ञात करें जिसमें कोई त्रुटि है।

हम जानते हैं कि परिश्रम का फल सदा ही मीठा होती है।

Ans

1. हम जानते हैं कि
2. सदा ही
3. परिश्रम का फल
4. मीठा होती है।

Q.2
2 दिए गए शब्द के पर्यायवाची शब्द का चयन करें।

कुबेर

Ans

1. यक्षराज
2. गिरिराज
3. महाराज
4. यमराज

Q.2
3 दिए गए वाक्य का वह भाग ज्ञात करें जिसमें कोई त्रुटि है।

आजकल तापमान में तेजी से परिवर्तन हो रही है।

Ans

1. तेजी से
2. आजकल
3. तापमान में
4. परिवर्तन हो रही है।

Q.2
4 दिए गए वाक्य में रेखांकित खंड को प्रतिस्थापित करने के लिए सबसे उपयुक्त विकल्प का चयन करें।

शीला मेरी बहन है, वह बच्चों के साथ खेल रहा है।

Ans

1. बच्चों से साथ खेल रही है।
2. बच्चों के साथ खेल रही है।
3. बच्चों को साथ खेल रही है।
4. बच्चों के साथ खेल रहे हैं।

Q.2
5 दिए गए शब्द का विलोम चुनें।

यश

Ans

- 1. नीरव
- 2. सुयश
- 3. अपयश
- 4. नीरस

Question ID : 9895803431
Chosen Option : --

Constable (GD) in CAPFs, NIA, SSF and Rifleman (GD) in Assam Rifles Examination, 2018

Roll No. :	
Registration No.	
Name :	
Exam Venue :	
Exam Time :	12:30 PM - 2:00 PM
Exam Date :	11/02/2019

Section : General Section

Q.1 Identify the correct option to complete the following series.

5, 8, 13, 20, 29, _____, 53, 68, 85

- Ans 1. 40
 2. 39
 3. 35
 4. 36

Question ID : 9895802463

Chosen Option : 1

Q.2 Identify the number that is different from the rest.

- Ans 1. 625
 2. 115
 3. 125
 4. 25


Question ID : 9895802465

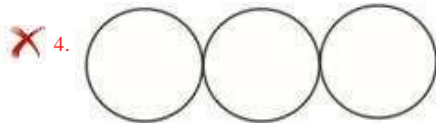

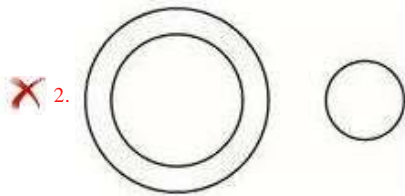
Chosen Option : 2

Q.3

Select the Venn diagram that best illustrates the relationship between the three given classes.

Ans Languages, Hindi, Malayalam





Question ID : 9895802473

Chosen Option : 3

Q.4 A medical representative plans to visit each of six hospitals — A, B, C, D, E and F — exactly once during the course of one day. He is setting up his schedule for the day according to the following conditions:

- i. He must visit A before B and E.
- ii. He must visit B before D.
- iii. The third hospital he visits must be C.

Which of the following could be the order in which the medical representative visits the six hospitals?

- Ans** 1. A, F, C, D, E, B
2. C, E, A, B, D, F
3. C, F, A, E, D, B
4. A, B, C, D, E, F

Question ID : 9895802458

Chosen Option : 2

Q.5 Read the given statements and conclusions carefully. Assuming that the information given in the statements is true, even if they appear to be at variance with commonly known facts, decide which of the conclusions logically follow(s) from the statements beyond reasonable doubt.

Statements:

- No cat is a monkey.
- No monkey is a cow.

Conclusions:

- I. No cat is a cow.
- II. Some cows are monkeys.

Ans 1.

- 2. Only conclusion II follows.
- 3. Neither conclusion I nor conclusion II follows.
- 4. Both conclusions I and II follow.

Question ID : 9895802460
Chosen Option : 2

Q.6 Select the option that is related to the third term in the same way as the second term is related to the first term.

ACE : EIM :: DFH : ?

- Ans
- 1. PLH
 - 2. HPL
 - 3. PHL
 - 4. HLP

Question ID : 9895802453
Chosen Option : 4

Q.7 Select the option in which the given figure is embedded.



Ans

- 1.
- 2.
- 3.
- 4.

Question ID : 9895802469
Chosen Option : 1

Q.8

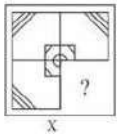
Identify the correct option to complete the following series.

50, 49, 47, 44, 40, 35, _____, 22

- Ans
- 1. 30
 - 2. 27
 - 3. 29
 - 4. 25

Question ID : 9895802462
Chosen Option : 3

Q.9 Select a figure from amongst the four alternatives, that when placed in the blank space (?) of figure X will complete the pattern. (Rotation is not allowed).

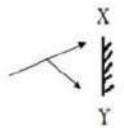


Ans

- 1.
- 2.
- 3.
- 4.

Question ID : 9895802470
Chosen Option : 2

Q.1 Choose the alternative which most closely resembles the mirror image of the given figure when mirror is placed at right side.



Ans

- 1.
- 2.



Question ID : 9895802471
Chosen Option : 1

Q.1
1 If KITCHEN is coded as LKWGMKU, then SHAMPOO will be coded as _____.

- Ans 1. TJDQUUV
 2. TJDQTUU
 3. TJDQTUV
 4. TJEQUUV

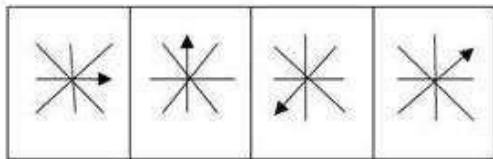
Question ID : 9895802456
Chosen Option : 3

Q.1
2 Identify the odd pair from the following.

- Ans 1. Eagle : Swoop
 2. Pig : Sty
 3. King : Palace
 4. Bird : Nest

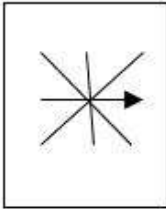
Question ID : 9895802452
Chosen Option : 2

Q.1
3 Select the figure that will come next in the following series.

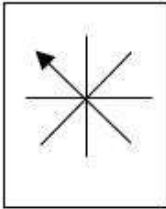


- Ans 1.

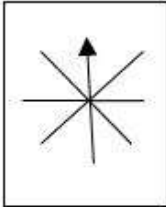
2.



3.



4.



Question ID : 9895802468

Chosen Option : 1

Q.1 In the following number series, two numbers have been put within brackets. Study the series carefully and select the correct alternative with respect to the series.

3, 9, (27), 81, (243), 729, 2187

Ans 1.

The first bracketed number (from the left) is correct and the second is incorrect.

2. Both the bracketed numbers are correct.

3. Both the bracketed numbers are incorrect.

4.

The first bracketed number (from the left) is incorrect and the second is correct.

Question ID : 9895802467

Chosen Option : 1

Q.1 'Athletics' is related to 'Stadium' in the same way as 'Skating' is related to '_____'.
5

Ans 1. Ground

2. Track

3. Rink

4. Court

Question ID : 9895802454

Chosen Option : 3

Q.1 Seven employees, T, U, V, W, X, Y and Z, reach their factory in a particular sequence. Y reaches immediately before T but does not immediately follow W. V is the last one to reach. X immediately follows T and is subsequently followed by Z. W reaches before T. Who is the second to reach the factory?
6

Ans 1.

2. X

3. W

4. Z

Question ID : 9895802459
Chosen Option : 2

Q.1
7 If B = 3 and H = 9, then SCHOOL = _____.

Ans 1. 78

2. 76

3. 69

4. 96

Question ID : 9895802455
Chosen Option : 3

Q.1
8 Identify the odd one from the following.

Ans 1. Volume

2. Small

3. Height

4. Weight

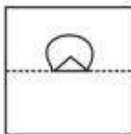
Question ID : 9895802450
Chosen Option : 1

Q.1
9 A square transparent sheet with a pattern is given. How will the pattern appear when the transparent sheet is folded along the dotted line?

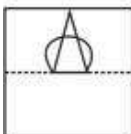


Ans

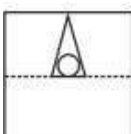
1.



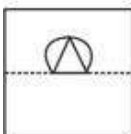
2.



3.



4.



Question ID : 9895802472
Chosen Option : 2

Q.2
0 Identify the odd one from the following.

- Ans
- 1. EV
 - 2. KP
 - 3. DX
 - 4. HS

Question ID : 9895802451
Chosen Option : 2

Q.2
1 Six students are sitting in a row. Akbar is to the left of the person sitting in the middle, but to the right of Sekar. Prakash is to the right of Deva, and Ram is to the right of Prakash. Ram is second from the person sitting in the middle. Who is the person sitting in the middle?

- Ans
- 1. Sekar
 - 2. Akbar
 - 3. Deva
 - 4. Ram

Question ID : 9895802457
Chosen Option : 3

Q.2
2 The statements below are followed by two conclusions labeled I and II. Assuming that the information in the statements is true, even if it appears at variance with generally established facts, decide which conclusion(s) logically and definitely follow(s) from the information given in the statements.

Statements:

All papers are books.

All books are papaya.

Conclusion

I. All papers are papaya.

II. Some papayas are papers.

- Ans
- 1. Only conclusion I follows.
 - 2. Neither conclusion I nor conclusion II follows.
 - 3. Only conclusion II follows.
 - 4. Both conclusions I and II follow.

Question ID : 9895802461
Chosen Option : 4

Q.2
3 Which two signs need to be interchanged to make the given equation correct?

$$20 \div 20 + 20 - 20 \times 20 = 20$$

- Ans
- 1. + and ÷
 - 2. + and -
 - 3. ÷ and ×
 - 4. + and ×

Question ID : 9895802466
Chosen Option : 3

Q.2
4 Select the term that will come next in the following series.

a, cd, fgh, jklm, opqrs, _____

- Ans
- 1. uvwxyz
 - 2. vwxyza
 - 3. uvwxy
 - 4. tuvwx

Question ID : 9895802449
Chosen Option : 4

Q.2
5 Select the option that is related to the third term in the same way as the second term is related to the first term.

$\frac{5}{6} : 121 :: \frac{8}{9} : \underline{\hspace{2cm}}$

- Ans
- 1. 145
 - 2. 300
 - 3. 289
 - 4. 356

Question ID : 9895802464
Chosen Option : 4

Q.2
6 The directional growth movement in plants due to touch is called _____.

- Ans
- 1. thigmonasty
 - 2. geotropism
 - 3. phototropism
 - 4. chemotropism

Question ID : 9895803027
Chosen Option : 2

Q.2
7 The deltas of the Mahanadi and the Godavari are rich in _____ soil.

- Ans
- 1. black
 - 2. arid
 - 3. forest

4. alluvial

Question ID : 9895803009

Chosen Option : 4

Q.2
8 A person with the blood group _____ is considered to be a universal donor.

- Ans
- 1. O negative
 - 2. AB positive
 - 3. AB negative
 - 4. O positive

Question ID : 9895803024

Chosen Option : 4

Q.2
9 When was the Planning Commission set up?

- Ans
- 1. 2019
 - 2. 2000
 - 3. 1947
 - 4. 1950

Question ID : 9895803013

Chosen Option : 4

Q.3
0 The three-tier system of local government does NOT include the _____.

- Ans
- 1. Panchayat Samiti
 - 2. Village Committee
 - 3. Gram Panchayat
 - 4. Zila Parishad

Question ID : 9895803017

Chosen Option : 3

Q.3
1 The United States of America adopted a democratic constitution in _____.

- Ans
- 1. 1932
 - 2. 1787
 - 3. 1877
 - 4. 2000

Question ID : 9895803016

Chosen Option : 1

Q.3
2 In which battle Napoleon was defeated?

- Ans
- 1.

- 2. Jena
- 3. Waterloo
- 4. Arcole

Question ID : 9895803003
Chosen Option : 3

Q.3
3 Which of the following is the hardest substance?

- Ans
- 1. Coal
 - 2. Diamond
 - 3. Silver
 - 4. Iron

Question ID : 9895803010
Chosen Option : 2

Q.3
4 The Statue of Unity in India is the world's tallest statue of _____.

- Ans
- 1. M.K Gandhi
 - 2. Sardar Vallabhbhai Patel
 - 3. Vinoba Bhave
 - 4. Dr B.R Ambedkar

Question ID : 9895803019
Chosen Option : 2

Q.3
5 Begum Hazrat Mahal is associated to which of the following revolts of India?

- Ans
- 1. Moplah Revolt 1921
 - 2. Paik Revolt 1817
 - 3. Gond Revolt 1941
 - 4. Sepoy Mutiny 1857

Question ID : 9895803004
Chosen Option : 3

Q.3
6 The National Rural Employment Guarantee Act was passed in _____.

- Ans
- 1. 2005
 - 2. 1900
 - 3. 2019
 - 4. 2000

Question ID : 9895803012
Chosen Option : 1

Q.3
7 Name the famous Indian cricketer who wrote the book 'A Century Is Not Enough'.

- Ans
- 1. Virender Sehwag
 - 2. Virat Kohli
 - 3. Sachin Tendulkar
 - 4. Sourav Ganguly

Question ID : 9895803006
Chosen Option : 4

Q.3
8 _____ won the Miss World 2017 pageant.

- Ans
- 1. Lara Dutta
 - 2. Anukreethy
 - 3. Manushi Chillar
 - 4. Yukta Mukhi

Question ID : 9895803023
Chosen Option : 3

Q.3
9 _____ is a dance form which represents a unique synthesis of Hindu and Muslim genius in art.

- Ans
- 1. Kathak
 - 2. Manipuri
 - 3. Odissi
 - 4. Kathkali

Question ID : 9895803018
Chosen Option : 2

Q.4
0 The smallest living bird is the _____.

- Ans
- 1. hummingbird
 - 2. canary
 - 3. house sparrow
 - 4. dove

Question ID : 9895803025
Chosen Option : 1

Q.4
1 The largest backwater lake in Odisha is _____.

- Ans
- 1. Dal lake
 - 2. Wular lake
 - 3. Chilika lake
 - 4. Pulicat lake

Question ID : 9895803011
Chosen Option : 3

Q.4
2 In India, currency notes of ₹ 500 and ₹ 1,000 were declared invalid in the year?

- Ans
- 1. 1998
 - 2. 2019
 - 3. 2016
 - 4. 2001

Question ID : 9895803014
Chosen Option : 3

Q.4
3 The first lady Indian Air Force officer to fly MIG 21 is _____.

- Ans
- 1. Khusboo Mehta
 - 2. Bhavna Sharma
 - 3. Anjali Gupta
 - 4. Avani Chaturvedi

Question ID : 9895803022
Chosen Option : 3

Q.4
4 Which of the following is NOT a multicellular animal?

- Ans
- 1. Amoeba
 - 2. Cat
 - 3. Human
 - 4. Horse

Question ID : 9895803026
Chosen Option : 1

Q.4
5 Prithvi Raj Chauhan was defeated at the hands of _____, in the battle of Tarain, 1192.

- Ans
- 1. Mohammad Ghori
 - 2. Harun Al Rashid
 - 3. Abu Bakr
 - 4. Umar II

Question ID : 9895803005
Chosen Option : 1

Q.4
6 Which state has the largest coast line?

- Ans
- 1. Karnataka
 - 2. Kerala
 - 3. Tamil Nadu
 - 4. Gujarat

Question ID : 9895803008

Chosen Option : 4

Q.4 The All-India War Memorial, built in the memory of the Indian soldiers who laid down their lives in the First World War, is known today as _____.

- Ans
- 1. Char Minar
 - 2. Lal Qila
 - 3. Jama Masjid
 - 4. India Gate

Question ID : 9895803020

Chosen Option : 4

Q.4 Which Hindi movie is based on the Indian hockey team on their first Olympic gold since India became independent?

- Ans
- 1. Lagaan
 - 2. MS Dhoni
 - 3. Gold
 - 4. Chak De

Question ID : 9895803007

Chosen Option : 4

Q.4 Identify the author of the book "Straight from the heart"

- Ans
- 1. Sachin Tendulkar
 - 2. Kapil Dev
 - 3. M.S. Dhoni
 - 4. Saurav Ganguly

Question ID : 9895803021

Chosen Option : 2

Q.5 Which country gave universal suffrage since the 19th century?

- Ans
- 1. Sri Lanka
 - 2. India
 - 3. Pakistan
 - 4. New Zealand

Question ID : 9895803015

Chosen Option : 2

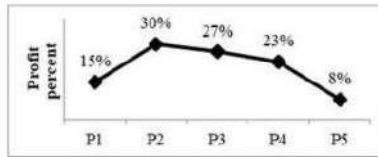
Q.5 A person purchased 12 bags of sugar at the rate of ₹ 1200 per bag, 8 bags at the rate of ₹ 1500 per bag and 10 bags at the rate of ₹ 2100 per bags. What will be the average cost of all the bags together?

- Ans
- 1. ₹ 1420
 - 2.
 - 3. ₹ 1580

4. ₹ 1640

Question ID : 9895804134
Chosen Option : 3

Q.5 The line chart given below shows the profit percentage of a company on 5 different products P1, P2, P3, P4 and P5.
2



The expenditure of product P5 is ₹ 46000. What is revenue of product P5?

- Ans 1. ₹ 52780
 2. ₹ 9680
 3. ₹ 47360
 4. ₹ 4600

Question ID : 9895804153
Chosen Option : 4

Q.5 A bowler has taken 0, 3, 2, 1, 5, 3, 4, 5, 5, 2, 2, 0, 0, 1 and 2 wickets in 15 consecutive matches.
3

What is the median of the given data?

- Ans 1. 1
 2. 3
 3. 0
 4. 2

Question ID : 9895804137
Chosen Option : 3

Q.5 A sum of ₹ 9800 gives simple interest of ₹ 4704 in 6 years. What will be the rate of interest per annum?
4

- Ans 1. 9%
 2. 8.5%
 3. 8%
 4. 7.5%

Question ID : 9895804144
Chosen Option : 4

Q.5 What is the value of $7\frac{1}{4} + [6 + (5 - 8 \div 4) - 1]$?
5

- Ans 1. $\frac{61}{4}$
 2. $\frac{29}{2}$

3. $\frac{23}{2}$

4. $\frac{57}{4}$

Question ID : 9895804133
Chosen Option : 2

Q.5 ₆ If Rohit can cover a distance of 1188 km in 22 hours, then what is the speed of Rohit?

Ans 1. 54 m/s

2. 25 m/s

3. 15 m/s

4. 48 m/s

Question ID : 9895804149
Chosen Option : 1

Q.5 ₇ The average weight of a group of 24 students increases by 2 kg when the weight of teacher is also included. If the initial average weight of the group of 24 students was 30 kg, then what is the weight of teacher?

Ans 1. 32 kg

2. 82 kg

3. 80 kg

4. 92 kg

Question ID : 9895804135
Chosen Option : 1

Q.5 ₈ Selling price and cost price of an article are ₹ 1333 and ₹ 2150. What will be the loss percentage?

Ans 1. 38%

2. 61.30%

3. 48%

4. 54.4%

Question ID : 9895804139
Chosen Option : 1

Q.5 ₉ If the diameter of a circle increases by 15%, then what will be the percentage increase in its area?

Ans 1. 35.75%

2. 30.3%

3. 25%

4. 32.25%

Question ID : 9895804151
Chosen Option : 1

Q.6 Mohit goes to his office at the speed of 10 m/s and returns to his home at the speed of x km/hr. If average speed of Mohit for the whole journey is 12 m/s, then what is the value of x ?

- Ans
- 1. 25 km/hr
 - 2. 15 km/hr
 - 3. 36 km/hr
 - 4. 54 km/hr

Question ID : 9895804148

Chosen Option : 3

Q.6 If $A : B = 7 : 8$ and $B : C = 7 : 9$, then what is the ratio of $A : B : C$?

- Ans
- 1. 56 : 49 : 72
 - 2. 49 : 56 : 72
 - 3. 56 : 72 : 49
 - 4. 72 : 56 : 49

Question ID : 9895804142

Chosen Option : 1

Q.6 Rohit multiplies a number by 2 instead of dividing the number by 2. Resultant number is what percentage of the correct value?

- Ans
- 1. 200%
 - 2. 300%
 - 3. 50%
 - 4. 400%

Question ID : 9895804138

Chosen Option : 4

Q.6 The perimeter of a square and a circle are same. If the area of the circle is 1386 cm^2 , then what will be the area of the square?

- Ans
- 1. 1089 cm^2
 - 2. 841 cm^2
 - 3. 1024 cm^2
 - 4. 1225 cm^2

Question ID : 9895804150

Chosen Option : 2

Q.6 Rohan purchased tables at the rate of ₹ 275 per table. If he sells 16 tables for ₹ 5060, then what will be the profit percentage?

- Ans
- 1. 13.04%
 - 2. 16%
 - 3. 15%
 - 4. 12.5%

Question ID : 9895804140
Chosen Option : 3

Q.6 If Highest common Factor of two numbers is 8, then which of the following cannot be their Least Common Multiple?
5

- Ans
- 1. 72
 - 2. 24
 - 3. 68
 - 4. 48

Question ID : 9895804131
Chosen Option : 4

Q.6 P and Q together can complete a work in 105 days, Q and R together can complete the same work in 90 days, P and R together can complete the same work in 126 days. In how many days P, Q and R together can complete the same work?
6

- Ans
- 1. 70 days
 - 2. 74 days
 - 3. 76 days
 - 4. 72 days

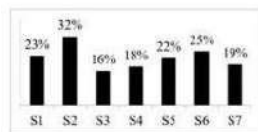
Question ID : 9895804146
Chosen Option : 2

Q.6 A alone can complete a work in 14 days and B alone can complete the same work in 21 days. A and B start the work together but A leaves the work after 4 days of the starting of work. In how many days B will complete the remaining work?
7

- Ans
- 1. 9 days
 - 2. 16 days
 - 3. 12 days
 - 4. 11 days

Question ID : 9895804147
Chosen Option : 1

Q.6 The bar chart given below shows the amount of sugar used in making 7 different varieties of sweets S1, S2, S3, S4, S5, S6 and S7 has been shown as a percentage of total weight of the sweet.
8



The combined weight of sweet S5 and S3 is 300 kg. What is the total amount of sugar used in these two sweets together?

- Ans
- 1. Cannot be determined
 - 2. 54 kg
 - 3. 57 kg
 - 4. 60 kg

Question ID : 9895804154

Chosen Option : 4

Q.6 The marked price of a chair and a table are in the ratio 2:3 respectively. The shopkeeper gives 20% discount on the chair. If the combined discount on both the chair and the table is 26%, then what will be the discount given on the table?

- Ans
- 1. 34%
 - 2. 32%
 - 3. 30%
 - 4. 28%

Question ID : 9895804136

Chosen Option : 3

Q.7 In a Company, number of engineers doubles itself in every 2 years. In how much time will the number of engineers become 1024 times of its original number?

- Ans
- 1. 12 years
 - 2. 20 years
 - 3. 15 years
 - 4. 24 years

Question ID : 9895804145

Chosen Option : 2


Q.7 $A : B = 5 : 8$ and $B : C = 11 : 13$. If $A = 110$, then what is the value of C ?

- Ans
- 1. 176
 - 2. 104
 - 3. 208
 - 4. 88

Question ID : 9895804143

Chosen Option : 2

Q.7 The bar chart given below shows the ratio of expenditure to revenue for seven consecutive years Y1, Y2, Y3, Y4, Y5, Y6 and Y7.



In which year is the profit highest?

- Ans
- 1. Y5
 - 2. Y6
 - 3. Cannot be determined
 - 4. Y2

Question ID : 9895804155

Chosen Option : 2

Q.7
3 If the side of a square increases by 20%, then what will be percent increase in its perimeter?

- Ans
- 1. 44%
 - 2. 20%
 - 3. 80%
 - 4. 40%

Question ID : 9895804152
Chosen Option : 4

Q.7
4 If $P : Q : R = 5 : 3 : 6$, then what will be the ratio of $(P/Q) : (Q/R) : (R/P)$?

- Ans
- 1. 50 : 15 : 36
 - 2. 50 : 45 : 36
 - 3. 75 : 15 : 36
 - 4. 40 : 12 : 27

Question ID : 9895804141
Chosen Option : 3

Q.7
5 What is the value of $\left(\frac{5}{2} \text{ of } 5 \div 4 - 2 \text{ of } \frac{1}{7} \div \frac{1}{7}\right)$?

- Ans
- 1. $\frac{13}{8}$
 - 2. $\frac{23}{18}$
 - 3. $\frac{17}{16}$
 - 4. $\frac{9}{8}$

Question ID : 9895804132
Chosen Option : 3

Section : English Language

Q.1 Select the word which means the same as the group of words given.

A disease that is prevalent in a particular area

- Ans
- 1. Genetic
 - 2. Contagious
 - 3. Endemic
 - 4. Viral

Question ID : 9895803694
Chosen Option : 4

Q.2 Select the correctly spelt word.

- Ans
- 1. Changeble
 - 2. Changable
 - 3. Chageable
 - 4. Changeable

Question ID : 9895803697
Chosen Option : 2

Q.3 Select the word which means the same as the group of words given.

One who studies and cares about environment

- Ans
- 1. Archeologist
 - 2. Ecologist
 - 3. Anthropologist
 - 4. Biologist

Question ID : 9895803695
Chosen Option : 2

Q.4 Select the most appropriate word to fill in the blank.

The Prime Minister was as good as his _____.

- Ans
- 1. word
 - 2. office
 - 3. sword
 - 4. dress

Question ID : 9895803680
Chosen Option : 2

Q.5 Select the most appropriate word to fill in the blank.

While in Rome we must do as Romans _____.

- Ans
- 1. is doing
 - 2. was doing
 - 3. had done
 - 4. do

Question ID : 9895803678
Chosen Option : 2

Q.6

Select the most appropriate word to fill in the blank.

They never _____ those who have done wrong.

- Ans
- 1. condemn
 - 2. outcast
 - 3. blame
 - 4. forgive

Question ID : 9895803681
Chosen Option : 4

Comprehension:

In the following passage some words have been deleted. Fill in the blanks with the help of the alternatives given.

Every day for a whole year, all kinds of holy men, hermits, scholars and nobles came, and related to the priests their deeds of (1) _____, and the priests in solemn council heard their claims. At last, they decided that the one who seemed to be the greatest lover of (2) _____ was a rich man who had that very year given all his (3) _____ to the poor. So they gave him the plate of gold, but when he took it in his hand, it turned into (4) _____ lead; though, when he dropped it on the floor, to his (5) _____, it became gold again.

SubQuestion No : 7

Q.7 Select the most appropriate option that will fill in the blank number 1.

- Ans
- 1. charity
 - 2. kindness
 - 3. happiness
 - 4. sympathy

Question ID : 9895803683
Chosen Option : 3

Comprehension:

In the following passage some words have been deleted. Fill in the blanks with the help of the alternatives given.

Every day for a whole year, all kinds of holy men, hermits, scholars and nobles came, and related to the priests their deeds of (1) _____, and the priests in solemn council heard their claims. At last, they decided that the one who seemed to be the greatest lover of (2) _____ was a rich man who had that very year given all his (3) _____ to the poor. So they gave him the plate of gold, but when he took it in his hand, it turned into (4) _____ lead; though, when he dropped it on the floor, to his (5) _____, it became gold again.

SubQuestion No : 8

Q.8 Select the most appropriate option that will fill in the blank number 2.

- Ans
- 1. destitute
 - 2. moneyless
 - 3. mankind
 - 4. women

Question ID : 9895803684
Chosen Option : 3

Comprehension:

In the following passage some words have been deleted. Fill in the blanks with the help of the alternatives given.

Every day for a whole year, all kinds of holy men, hermits, scholars and nobles came, and related to the priests their deeds of (1) _____, and the priests in solemn council heard their claims. At last, they decided that the one who seemed to be the greatest lover of (2) _____ was a rich man who had that very year given all his (3) _____ to the poor. So they gave him the plate of gold, but when he took it in his hand, it turned into (4) _____ lead; though, when he dropped it on the floor, to his (5) _____, it became gold again.

SubQuestion No : 9

Q.9 Select the most appropriate option that will fill in the blank number 3.

- Ans
- 1. wealth
 - 2. energy
 - 3. time
 - 4. life

Question ID : 9895803685
Chosen Option : 3

Comprehension:

In the following passage some words have been deleted. Fill in the blanks with the help of the alternatives given.

Every day for a whole year, all kinds of holy men, hermits, scholars and nobles came, and related to the priests their deeds of __ (1) _____, and the priests in solemn council heard their claims. At last, they decided that the one who seemed to be the greatest lover of (2) _____ was a rich man who had that very year given all his (3) _____ to the poor. So they gave him the plate of gold, but when he took it in his hand, it turned into (4) _____ lead; though, when he dropped it on the floor, to his (5) _____, it became gold again.

SubQuestion No : 10

Q.1
0 Select the most appropriate option that will fill in the blank number 4.

- Ans
- 1. gold
 - 2. worthy
 - 3. worthless
 - 4. valuable

Question ID : 9895803686

Chosen Option : 2

Comprehension:

In the following passage some words have been deleted. Fill in the blanks with the help of the alternatives given.

Every day for a whole year, all kinds of holy men, hermits, scholars and nobles came, and related to the priests their deeds of __ (1) _____, and the priests in solemn council heard their claims. At last, they decided that the one who seemed to be the greatest lover of (2) _____ was a rich man who had that very year given all his (3) _____ to the poor. So they gave him the plate of gold, but when he took it in his hand, it turned into (4) _____ lead; though, when he dropped it on the floor, to his (5) _____, it became gold again.

SubQuestion No : 11

Q.1
1 Select the most appropriate option that will fill in the blank number 5.

- Ans
- 1. confusion
 - 2. happiness
 - 3. admiration
 - 4. amazement

Question ID : 9895803687

Q.1
2 Select the antonym of the given word.

HORIZONTAL

- Ans
- 1. Parallel
 - 2. Financial
 - 3. Official
 - 4. Vertical

Question ID : 9895803689
Chosen Option : 1

Q.1
3 From the given options, identify the segment in the sentence which contains the grammatical error.

Does he like to go for sightseeing when he is in holiday?

- Ans
- 1. when he is
 - 2. Does he like
 - 3. in holiday?
 - 4. to go for sightseeing

Question ID : 9895803672
Chosen Option : 3

Q.1
4 Select the option that means the same as the given idiom.

In a nutshell

- Ans
- 1. In discussion
 - 2. In writing
 - 3. In detail
 - 4. In brief

Question ID : 9895803692
Chosen Option : 2

Q.1
5 Select the most appropriate word to fill in the blank.

I make friends _____ I go.

- Ans
- 1. moreover
 - 2. wherever
 - 3. however
 - 4. whenever

Question ID : 9895803679
Chosen Option : 4

Q.1
6 Select the synonym of the given word.

APPARENT

- Ans
- 1. Considerable
 - 2. Doubtful
 - 3. Obvious
 - 4. Questionable

Question ID : 9895803690
Chosen Option : 1

Q.1
7 From the given options, identify the segment in the sentence which contains the grammatical error.

She was known for her skills in dance and music; she is equal proficient in the allied art of painting.

- Ans
- 1. skills in dance
 - 2. allied art of painting
 - 3. was known
 - 4. is equal proficient

Question ID : 9895803673
Chosen Option : 2

Q.1
8 Select the antonym of the given word.

ABOLISH

- Ans
- 1. Build
 - 2. Affirm
 - 3. Cancel
 - 4. Finish

Question ID : 9895803688
Chosen Option : 1

Q.1
9 From the given options, identify the segment in the sentence which contains the grammatical error.

The population of Sri Lanka are less than that of India.

- Ans
- 1. than that
 - 2. Sri Lanka are
 - 3. of India
 - 4. The population

Question ID : 9895803674
Chosen Option : 2

Q.2
0 Select the correctly spelt word.

- Ans
- 1.

- 2. Millenium
- 3. Millenniumm
- 4. Millennium

Question ID : 9895803696
Chosen Option : 3

Q.2 Select the most appropriate option to substitute the underlined segment in the given sentence. If there is no need to substitute it, select No Improvement.

The football coach urged the team were give its best to the final match.

- Ans
- 1. No Improvement.
 - 2. That it give its best
 - 3. Try to give it best
 - 4. To give its best

Question ID : 9895803676
Chosen Option : 2

Q.2 Select the synonym of the given word.

CURATIVE

- Ans
- 1. Trembling
 - 2. Damaging
 - 3. Feeding
 - 4. Healing

Question ID : 9895803691
Chosen Option : 3

Q.2 Select the most appropriate option to substitute the underlined segment in the given sentence. If there is no need to substitute it, select No Improvement.

She give me everything I asked for.

- Ans
- 1. Is giving me everything
 - 2. gave me everything
 - 3. No Improvement
 - 4. gave myself everything

Question ID : 9895803677
Chosen Option : 1

Q.2 Select the most appropriate option to substitute the underlined segment in the given sentence. If there is no need to substitute it, select No Improvement.

A Study has shown that the use of mobile data in India have increased 50 times over the last three years

- Ans
- 1. No improvement
 - 2. has increased 50 times

3. Has been increased to 50 times
 4. Is increasing 50 times

Question ID : 9895803675
Chosen Option : 3

Q.2 Select the option that means the same as the given idiom.

To keep an eye on

- Ans 1. To keep a watch
 2. To be cautious
 3. To follow
 4. To stare

Question ID : 9895803693
Chosen Option : 2

Section : Hindi Language

Q.1 दिए गए शब्द का विलोम चुनें।

उत्थान

- Ans 1. गमन
 2. जड़
 3. चलन
 4. पतन

Question ID : 9895803456
Chosen Option : --

Q.2 दिये गये वाक्यांश के लिए एक शब्द चुनिए।

रात में घूमने वाला

- Ans 1. दिनचर
 2. निशाचर
 3. शनिचर
 4. खगचर

Question ID : 9895803463
Chosen Option : --

Q.3 सही वर्तनी वाले शब्द का चयन करें।

Ans

- 1. सर्वभक्षी
- 2. सरवभक्षी
- 3. सरवभक्षी
- 4. सर्वभक्षी

Question ID : 9895803464
Chosen Option : --

Q.4 दिए गए वाक्य का वह भाग ज्ञात करें जिसमें कोई त्रुटि है।

आत्मसम्मानी व्यक्ति का हृदय में लोभ का भाव नहीं होता।

Ans

- 1. नहीं होता।
- 2. आत्मसम्मानी व्यक्ति का
- 3. हृदय में
- 4. लोभ का भाव

Question ID : 9895803441
Chosen Option : --

Q.5 रिक्त स्थान को भरने के लिए सबसे उपयुक्त शब्द का चयन करें।

सूर्य उदय के _____ में भी जाग जाता हूँ।

Ans

- 1. अंदर बाहर
- 2. आगे पीछे
- 3. ऊपर नीचे
- 4. साथ

Question ID : 9895803446
Chosen Option : --

Comprehension:

दिए गए अनुच्छेद में कुछ शब्द हटा दिए गए हैं। दिए गए विकल्पों की सहायता से रिक्त स्थान भरें। प्रत्येक संख्या के लिए सबसे उपयुक्त विकल्प का चयन करें।

भाग्य परिवर्तन के लिए _____(1) ही एकमात्र सहारा है। केवल इच्छाओं द्वारा वांछित फल की _____(2) असंभव है। यदि व्यक्ति दिन में सपने देखता रहे, समुद्र के किनारे _____(3) धरकर बैठा रहे तो कोई लाभ न होगा। परिश्रमी व्यक्ति ही गोता लगाकर अतुल संपत्ति पा सकता है। परिश्रम ही _____(4) की कुंजी है। यह मनुष्य को स्वावलंबी व _____(5) बनाती है।

SubQuestion No : 6

Q.6 गद्यांश में संकेतित रिक्त स्थान (1) के लिए उपयुक्त शब्द होगा -

- Ans
- 1. परिश्रम
 - 2. आलस
 - 3. नींद
 - 4. खाना

Question ID : 9895803451
Chosen Option : --

Comprehension:

दिए गए अनुच्छेद में कुछ शब्द हटा दिए गए हैं। दिए गए विकल्पों की सहायता से रिक्त स्थान भरें। प्रत्येक संख्या के लिए सबसे उपयुक्त विकल्प का चयन करें।

भाग्य परिवर्तन के लिए _____(1) ही एकमात्र सहारा है। केवल इच्छाओं द्वारा वांछित फल की _____(2) असंभव है। यदि व्यक्ति दिन में सपने देखता रहे, समुद्र के किनारे _____(3) धरकर बैठा रहे तो कोई लाभ न होगा। परिश्रमी व्यक्ति ही गोता लगाकर अतुल संपत्ति पा सकता है। परिश्रम ही _____(4) की कुंजी है। यह मनुष्य को स्वावलंबी व _____(5) बनाती है।

SubQuestion No : 7

Q.7 गद्यांश में संकेतित रिक्त स्थान (2) के लिए उपयुक्त शब्द होगा -

- Ans
- 1. लेख
 - 2. प्राप्ति
 - 3. मौका
 - 4. गति

Question ID : 9895803452

Comprehension:

दिए गए अनुच्छेद में कुछ शब्द हटा दिए गए हैं। दिए गए विकल्पों की सहायता से रिक्त स्थान भरें। प्रत्येक संख्या के लिए सबसे उपयुक्त विकल्प का चयन करें।

भाग्य परिवर्तन के लिए _____(1) ही एकमात्र सहारा है। केवल इच्छाओं द्वारा वांछित फल की _____(2) असंभव है। यदि व्यक्ति दिन में सपने देखता रहे, समुद्र के किनारे _____(3) धरकर बैठा रहे तो कोई लाभ न होगा। परिश्रमी व्यक्ति ही गोता लगाकर अतुल संपत्ति पा सकता है। परिश्रम ही _____(4) की कुंजी है। यह मनुष्य को स्वावलंबी व _____(5) बनाती है।

SubQuestion No : 8

Q.8 गद्यांश में संकेतित रिक्त स्थान (3) के लिए उपयुक्त शब्द होगा -

- Ans
- 1. पैर पर पैर
 - 2. हाथ पर हाथ
 - 3. मुँह पर मुँह
 - 4. आँख पर आँख

Question ID : 9895803453

Chosen Option : --

Comprehension:

दिए गए अनुच्छेद में कुछ शब्द हटा दिए गए हैं। दिए गए विकल्पों की सहायता से रिक्त स्थान भरें। प्रत्येक संख्या के लिए सबसे उपयुक्त विकल्प का चयन करें।

भाग्य परिवर्तन के लिए _____(1) ही एकमात्र सहारा है। केवल इच्छाओं द्वारा वांछित फल की _____(2) असंभव है। यदि व्यक्ति दिन में सपने देखता रहे, समुद्र के किनारे _____(3) धरकर बैठा रहे तो कोई लाभ न होगा। परिश्रमी व्यक्ति ही गोता लगाकर अतुल संपत्ति पा सकता है। परिश्रम ही _____(4) की कुंजी है। यह मनुष्य को स्वावलंबी व _____(5) बनाती है।

SubQuestion No : 9

Q.9 गद्यांश में संकेतित रिक्त स्थान (4) के लिए उपयुक्त शब्द होगा -

- Ans
- 1. विफलता
 - 2. प्रसन्नता
 - 3. भाग्य

✗ 4. सफलता

Question ID : 9895803454

Chosen Option : --

Comprehension:

दिए गए अनुच्छेद में कुछ शब्द हटा दिए गए हैं। दिए गए विकल्पों की सहायता से रिक्त स्थान भरें। प्रत्येक संख्या के लिए सबसे उपयुक्त विकल्प का चयन करें।

भाग्य परिवर्तन के लिए _____(1) ही एकमात्र सहारा है। केवल इच्छाओं द्वारा वांछित फल की _____(2) असंभव है। यदि व्यक्ति दिन में सपने देखता रहे, समुद्र के किनारे _____(3) धरकर बैठा रहे तो कोई लाभ न होगा। परिश्रमी व्यक्ति ही गोता लगाकर अतुल संपत्ति पा सकता है। परिश्रम ही _____(4) की कुंजी है। यह मनुष्य को स्वावलंबी व _____(5) बनाती है।

SubQuestion No : 10

Q.1
0 गद्यांश में संकेतित रिक्त स्थान (5) के लिए उपयुक्त शब्द होगा -

- Ans
- ✗ 1. सुस्त
 - ✓ 2. उपेक्षित
 - ✗ 3. आलसी
 - ✗ 4. स्वाभिमानी

Question ID : 9895803455

Chosen Option : --

Q.1
1 दिए गए शब्द के पर्यायवाची शब्द का चयन करें।

आगंतुक

- Ans
- ✓ 1. अतिथि
 - ✗ 2. अनोखा
 - ✗ 3. अनुचर
 - ✗ 4. आत्मज

Question ID : 9895803459

Chosen Option : --

रिक्त स्थान को भरने के लिए सबसे उपयुक्त शब्द का चयन करें।

घोड़ा _____ रहा है।

- Ans
- 1. हिनहिना
 - 2. कूक
 - 3. मिमिया
 - 4. भौंक

Question ID : 9895803449

Chosen Option : --

Q.1
3 दिए गए शब्द का विलोम चुनें।

निर्माण

- Ans
- 1. अहित
 - 2. कोमल
 - 3. निश्चित
 - 4. ध्वंस

Question ID : 9895803457

Chosen Option : --

Q.1
4 दिए गए शब्द के पर्यायवाची शब्द का चयन करें।

बिजली

- Ans
- 1. वात
 - 2. दामिनी
 - 3. रिपु
 - 4. व्याध

Question ID : 9895803458

Chosen Option : --

Q.1
5 दिए गए वाक्य में रेखांकित खंड को प्रतिस्थापित करने के लिए सबसे उपयुक्त विकल्प का चयन करें।

यात्रा का प्रबन्ध शीघ्रता में हुआ था, अतः न तो उनके पास पर्याप्त वस्त्र थी और न ही धन का पूरा प्रबन्ध।

Ans 1.

न तो उनके पास पर्याप्त वस्त्र थी और न ही धन को पूरा प्रबंध।

✗ 2.

न तो उनके पास पर्याप्त वस्त्र थे, और न ही धन का पूरा प्रबंध।

✗ 3.

न तो उनके पास पर्याप्त वस्त्र थे, और न ही धन की पूरा प्रबंध।

✗ 4.

न तो उनके पास पर्याप्त वस्त्र थे, और नही धन को पूरा प्रबंध।

Question ID : 9895803444

Chosen Option : --

Q.1 निम्नलिखित में से उस विकल्प का चयन करें जो 'अँगूठा दिखाना' मुहाबरे का अर्थ व्यक्त करता है।

Ans ✗ 1. मौके पर मना कर देना

✗ 2. हँसना

✗ 3. चिढ़ाना

4. अँगूठा दिखाकर हँसी उड़ाना

Question ID : 9895803460

Chosen Option : --

Q.1 दिए गए वाक्य में रेखांकित खंड को प्रतिस्थापित करने के लिए सबसे उपयुक्त विकल्प का चयन करें।

छात्र जब परिश्रम के मार्ग पर चलता है, तो उसे सफलता व संतुष्टि का फल मिलती है।

Ans 1. फलों मिलना है।

✗ 2. फल मिलती हैं।

✗ 3. फल मिलता है।

✓ 4. फल मिलते हैं।

Question ID : 9895803443

Chosen Option : --

Q.1 दिए गए वाक्य का वह भाग ज्ञात करें जिसमें कोई त्रुटि है।

इतने वर्षों की उपरांत मिलने पर हम बहुत खुश हुए।

Ans 1. हम बहुत

2. खुश हुए।

✓ 3. इतने वर्षों की उपरांत

✗ 4. मिलने पर

Question ID : 9895803442

Chosen Option : --

Q.1
9 रिक्त स्थान को भरने के लिए सबसे उपयुक्त शब्द का चयन करें।

_____ बारिश हो रही है।

Ans ✗ 1. रिमझिम

✓ 2. सिमसिम

✗ 3. खड़खड़

✗ 4. कलकल

Question ID : 9895803447

Chosen Option : --

Q.2
0 निम्नलिखित में से उस विकल्प का चयन करें जो 'अपने मुँह मियाँ मिट्टू बनना' मुहावरे का अर्थ व्यक्त करता है।

Ans ✗ 1. अपनी प्रशंसा स्वयं करना

2. अपने मुँह से मिट्टू पकड़ना

3. दूसरों की प्रशंसा करना

4. अपनी प्रशंसा दूसरों से सुनना

Question ID : 9895803461

Chosen Option : --

Q.2
1 सही वर्तनी वाले शब्द का चयन करें।

Ans ✗ 1. आजनम

✓ 2. अजम्ना

✗ 3. अजनम

✗ 4. अजन्मा

Question ID : 9895803465

Chosen Option : --

Q.2
2 दिए गए वाक्य का वह भाग ज्ञात करें जिसमें कोई त्रुटि है।

युवक ही किसी देश को शक्ति का आधार होते हैं।

Ans

1. आधार होते हैं।
- ✗ 2. शक्ति का
3. युवक ही
- ✗ 4. किसी देश को

Question ID : 9895803440

Chosen Option : --

Q.2
3 दिए गए वाक्य में रेखांकित खंड को प्रतिस्थापित करने के लिए सबसे उपयुक्त विकल्प का चयन करें।

आज सुबह से बारिश हो रही है और बच्चा बारिश में नहा रहा है।

Ans

1. बच्चा बारिश में नहा रहा है।
- ✗ 2. बच्चों बारिश में नहा रही है।
- ✓ 3. बच्चे बारिशों में नहा रहा है।
- ✗ 4. बच्चा बारिश में नहा रही है।

Question ID : 9895803445

Chosen Option : --

Q.2
4 रिक्त स्थान को भरने के लिए सबसे उपयुक्त शब्द का चयन करें।

आज प्रत्येक गाँव में _____ खोले जा रहे हैं।

Ans

1. बंदरगाह
2. विश्वविद्यालय
3. हवाई अड्डे
4. विद्यालय

Question ID : 9895803448

Chosen Option : --

Q.2
5 दिये गये वाक्यांश के लिए एक शब्द चुनिए।

जो देखने योग्य हो

Ans

- ✗ 1. दर्शनीय
- ✗ 2. शोभनीय

✓ 3. प्रशंसनीय

✗ 4. रमणीय

Question ID : 9895803462
Chosen Option : --

Constable (GD) in CAPFs, NIA, SSF and Rifleman (GD) in Assam Rifles Examination, 2018

Roll No. :	
Registration No.	
Name :	
Exam Venue :	
Exam Time :	4:00 PM - 5:30 PM
Exam Date :	11/02/2019

Section : General Section

Q.1 Find the next number in the given series.

101, 123, 147, 173, ?

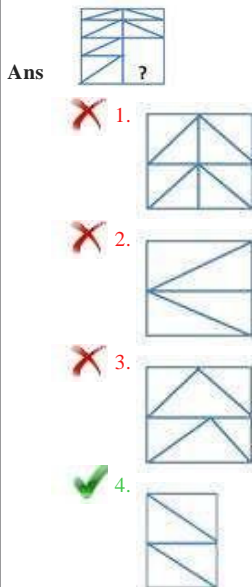
- Ans
- 1. 236
 - 2. 201
 - 3. 214
 - 4. 223

Question ID : 9895802488

Chosen Option : 4

Q.2

Select the option that will replace the question mark and complete the given pattern.



Question ID : 9895802494

Chosen Option : 4

Q.3

The statements below are followed by two conclusions labeled I and II.

Assuming that the information in the statements is true, even if it appears to be at variance with generally established facts, decide which conclusion(s) logically and definitely follow(s) from the information given in the statements.

Statements:

- 1) Some cats are goats.
- 2) All goats are cows.

Conclusion:

- I. All cows are goats.
- II. Some cats are cows.

- Ans 1. Both conclusions I and II follow
 2. Either conclusion I or II follows
 3. Only conclusion II follows
 4. Only conclusion I follows

Question ID : 9895802486
Chosen Option : 1

Q.4 Four numbers have been given out of which three are alike in some manner, while one is different. Choose the odd one.

- Ans 1. 68
 2. 72
 3. 48
 4. 96

Question ID : 9895802490
Chosen Option : 3

Q.5 A, B, C, D, E and F are six friends seating in a long bench. E and F are at the center while A and B are at the two extreme ends. C is sitting to the immediate left of A. Can you identify who is sitting to the immediate right of B?

- Ans 1. C
 2. D
 3. F
 4. E

Question ID : 9895802482
Chosen Option : 2

Q.6 Select the option that is related to the third term in the same way as the second term is related to the first term.

144 : 12 :: 576 : ?

- Ans 1.

2. 26

3. 21

4. 24

Question ID : 9895802489

Chosen Option : 4

Q.7 Select the option that is analogous to the given pair.

Heart : Cardiology

Ans 1. Plants : Zoology

2. Phycology : Fungi

3. Disease : Hospital

4. Virus : Virology

Question ID : 9895802478

Chosen Option : 1

Q.8 If in a certain code language the word POLITICAL is written as QNMHUHDZM, then in the same code language how will you write the word SOCIAL?

Ans 1. DBKNTH

2. NTHDBK

3. DHBKTN

4. TNDHBK

Question ID : 9895802480

Chosen Option : 3

Q.9 Six friends P, Q, R, S, T and U are sitting at a circular table facing the centre. S is sitting third to the left of T. R is not sitting between T and U. S is not the immediate neighbor of R. Q is seated second to the right of T. Who is sitting between U and Q?

Ans 1. S

2. R

3. P

4. T

Question ID : 9895802483

Chosen Option : 3

Q.1
0

The statements below are followed by two conclusions labeled I and II.

Assuming that the information in the statements is true, even if it appears to be at variance with generally established facts, decide which conclusion(s) logically and definitely follow(s) from the information given in the statements.

Statements:

- 1) All women are girls.
- 2) Some girls are painters.

Conclusion:

- I. All girls are women.
- II. Some women are painters.

- Ans
1. Only conclusion I follows
 2. Both conclusions I and II follow
 3. Neither conclusion I nor II follows
 4. Only conclusion II follows

Question ID : 9895802485
Chosen Option : 1

Q.1 What will be the value of the following equation if '+' means 'addition', '-' means 'subtraction', '÷' means 'multiplication' and '×' means 'division'?

$$49 \times 7 - 3 \div 9 + 4 = ?$$

- Ans
1. 31
 2. 26
 3. 35
 4. 39

Question ID : 9895802492
Chosen Option : 2

Q.1 Select the option that is related to the third term in the same way as the second term is related to the first term.

PURSE : UPRES :: RAZOR : ?

- Ans
1. AROZR
 2. AZROR
 3. ARZRO
 4. ARRZO

Question ID : 9895802479
Chosen Option : 1

3 Select the pair of letters that will follow next in the given series.

AB, GH, MN, ST, ?

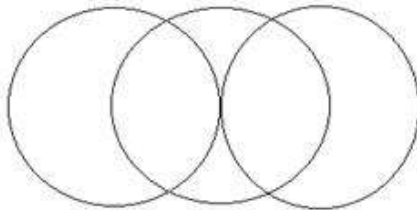
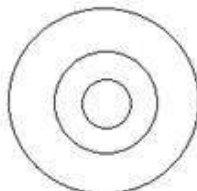

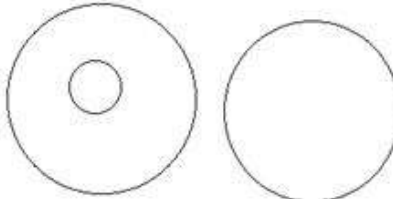
- Ans
- 1. YZ
 - 2. VW
 - 3. UV
 - 4. XY

Question ID : 9895802474
Chosen Option : 1

Q.1
4 Select the Venn diagram that best represents the relationship among the given set of classes:

Metals, Silver, Gold

Ans

- 1. 
- 2. 
- 3. 
- 4. 

Question ID : 9895802498
Chosen Option : 2

Q.1
5 Find the next number in the given series.

2, 10, 84, ?

- Ans
- 1.

2. 1229

3. 1124

4. 1032

Question ID : 9895802487

Chosen Option : 1

Q.1 Identify the mirror image of the following word when mirror is placed at right side.

6

INSOMNIA

Ans 1. AINMSOIN

2. AINMOZIN

3. INZOMNIV

4. INOZMIV

Question ID : 9895802496

Chosen Option : 3

Q.1 If in a certain code language TERRACE is written as 70, then in the same code language how will you write the word

7

BALCONY?

Ans 1. 74

2. 73

3. 72

4. 71

Question ID : 9895802481

Chosen Option : 3

Q.1 Pick the odd one out.

8

Ans 1. FGH

2. AEI

3. IOU

4. OUA

Question ID : 9895802475

Chosen Option : 2

Q.1 Pick the odd one out.

9

Ans 1. Detect

2. Perceive

3. Ignorance

4. Observe

Question ID : 9895802476

Chosen Option : 3

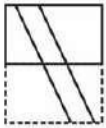
Q.2

0 Five men P, Q, R S and T are reading a newspaper. The one who reads it first, gives it to T. The one who reads it last, had taken it from R. Q is not the first or last one to read it. There were two readers between P and R. Who is the third one to have read the newspaper?

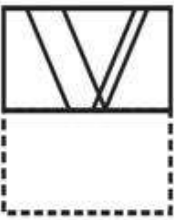
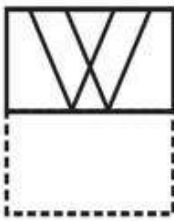
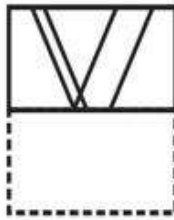
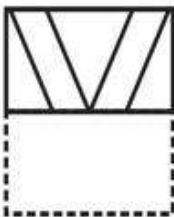
- Ans
- 1. R
 - 2. Q
 - 3. S
 - 4. P

Question ID : 9895802484
Chosen Option : 3

Q.2 A square transparent sheet with a pattern is given. How will the pattern appear when the transparent sheet is folded along the dotted line?



Ans

- 1. 
- 2. 
- 3. 
- 4. 

Question ID : 9895802497
Chosen Option : 4

Q.2
2 Complete the number triad:

12	20	28
21	19	?
31	21	11

- Ans
- 1. 8
 - 2. 17
 - 3. 12
 - 4. 15

Question ID : 9895802491
Chosen Option : 3

Q.2
3 Identify the odd pair from the following.

- Ans
- 1. Grapes : Bunch
 - 2. Flowers : Bouquet
 - 3. Bees : Swarm
 - 4. Man : Class

Question ID : 9895802477
Chosen Option : 4

Q.2
4 Identify the figure from the options that has the given figure embedded in it.

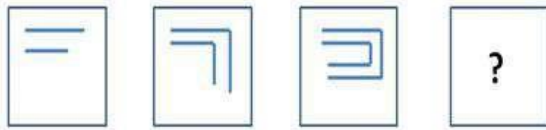


- Ans
- 1.
 - 2.
 - 3.
 - 4.

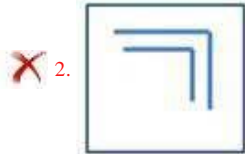

Question ID : 9895802495
Chosen Option : 1

Q.2
5

Which option will replace the question mark and complete the given figure series?



Ans



Question ID : 9895802493

Chosen Option : 3

Q.2 Who is the acting President of the BCCI as on Feb 2019?

Ans 1. Shashank Manohar

2. CK Khanna

3. Vinod Rai

4. Anurag Thakur

Question ID : 9895803057

Chosen Option : 4

Q.2 The Pakistani General _____ imposed military rule in his country in the year 1999.

Ans 1. Ziauddin Butt

2. Qamar Javed

3. Raheel Sharif

4. Parvez Musharraf

Question ID : 9895803065

Chosen Option : 3

Q.2 The Banaras Hindu University was founded by:

- Ans
- 1. Bal Gangadhar Tilak
 - 2. Jawaharlal Nehru
 - 3. Sir Syed Mohammad
 - 4. Pandit Madan Mohan Malaviya

Question ID : 9895803056
Chosen Option : 4

Q.2 Ag is the chemical symbol of an expensive, soft, white and lustrous metal which commonly known as _____.

- Ans
- 1. aluminium
 - 2. nickel
 - 3. mercury
 - 4. silver

Question ID : 9895803074
Chosen Option : 2

Q.3 Who among the following is a famous singer of Hindustani classical music?

- Ans
- 1. Shubha Mudgal
 - 2. Poornima Sharma
 - 3. Rita Ganguli
 - 4. Naina Devi

Question ID : 9895803070
Chosen Option : 2

Q.3 The right of a person, party or nation to stop a certain decision or law is called _____.

- Ans
- 1. authority
 - 2. vote
 - 3. veto
 - 4. power of attorney

Question ID : 9895803066
Chosen Option : 2

Q.3 Sodium hydroxide is NOT used for _____.

- Ans
- 1. making soap
 - 2. making newspapers
 - 3. degreasing metals
 - 4. preserving pickle

Question ID : 9895803078

Chosen Option : 1

Q.3 _____ took a hat-trick (three wickets) in the first over of the match against Pakistan in 2006, becoming the first and, to date, only bowler to do so.

- Ans
- 1. Parthiv Patel
 - 2. Rohit Sharma
 - 3. Irfan Pathan
 - 4. Sachin Tendulkar

Question ID : 9895803073

Chosen Option : 3

Q.3 _____ was the first woman Chief Election Commissioner of India.

- Ans
- 1. Pratibha Devi
 - 2. Meira Kumar
 - 3. Rama Devi
 - 4. Nirmala Sitaraman

Question ID : 9895803067

Chosen Option : 2

Q.3 Which of the following Steel plants of India does NOT come under the Public Sector?

- Ans
- 1. TISCO
 - 2. Rourkela Steel Plant
 - 3. Bhilai Steel Plant
 - 4. Durgapur Steel Plant

Question ID : 9895803064

Chosen Option : 4

Q.3 The book 'The Origin of Species' was written by _____.

- Ans
- 1. Louis Pasteur
 - 2. James Watson
 - 3. Charles Robert Darwin
 - 4. Jane Goodwill

Question ID : 9895803077

Chosen Option : 2

Q.3 Kathakali has its roots in the state of _____.

- Ans
- 1. Kerala
 - 2. Karnataka
 - 3. Andhra Pradesh
 - 4. Tamil Nadu

Question ID : 9895803068
Chosen Option : 2

Q.3
8 Who was Governor of the Reserve Bank of India who submitted his resignation in Dec 2018?

- Ans
- 1. Urjit Patel
 - 2. P Chidambaram
 - 3. Narendra Modi
 - 4. Dr. Manmohan Singh

Question ID : 9895803071
Chosen Option : 1

Q.3
9 Where is the Charminar located?

- Ans
- 1. Sikandrabad
 - 2. Mumbai
 - 3. Panaji
 - 4. Hyderabad

Question ID : 9895803069
Chosen Option : 4

Q.4
0 India and Srilanka are divided by _____.

- Ans
- 1. Gibraltar Strait
 - 2. Bering Strait
 - 3. Hormuz Strait
 - 4. Palk Strait

Question ID : 9895803060
Chosen Option : 3

Q.4
1 Which of the following are NOT a part of the circulatory system?

- Ans
- 1. Capillaries
 - 2. Villi
 - 3. Veins
 - 4. Arteries

Question ID : 9895803076
Chosen Option : 1

Q.4
2 Kharif crops can be described as the crops which are sown with the beginning of the _____ season.

- Ans
- 1.
 - 2. Summer

3. Spring

4. Rainy

Question ID : 9895803062
Chosen Option : 1

Q.4
3 Majuli, the largest riverine Island is found in which of the following rivers?

Ans 1. Narmada

2. Kaveri

3. Brahmaputra

4. Godavari

Question ID : 9895803061
Chosen Option : 2

Q.4
4 In August 1858, the British parliament passed an act that set an end to the rule of the company, It was called _____.

Ans 1. Government of India Act

2. Indian Trusts Act

3. Kazis Act

4. Fort William Act

Question ID : 9895803054
Chosen Option : 1

Q.4
5 The 2018 National Film Award for Best Actress was won by _____.

Ans 1. Deepika Padukone

2. Katrina Kaif

3. Sridevi

4. Alia Bhatt

Question ID : 9895803072
Chosen Option : 3

Q.4
6 The 2020 Olympic Games will be held in _____.

Ans 1. Tokyo

2. Rio de Janeiro

3. Paris

4. Beijing

Question ID : 9895803058
Chosen Option : 3

Q.4
7 M.K. Gandhi attended highly official meeting with _____ on the behalf of the Indian National Congress on negotiating terms of Constitutional reforms on 5 March 1931

- Ans
- 1. Lord Curzon
 - 2. Lord Ripon
 - 3. Lord Irwin
 - 4. Lord Clive

Question ID : 9895803055
Chosen Option : 2

Q.4
8 The Blue Revolution in India is related to _____.

- Ans
- 1. jute production
 - 2. indigo production
 - 3. agriculture
 - 4. fish production

Question ID : 9895803063
Chosen Option : 3

Q.4
9 The Indian desert lies towards the western margins of the _____.

- Ans
- 1. Kaimur Hills
 - 2. Himadri
 - 3. Nilgiri Hills
 - 4. Aravalli Hills

Question ID : 9895803059
Chosen Option : 3

Q.5
0 _____ is the smallest bone in the human body.

- Ans
- 1. Carpals
 - 2. Ulna
 - 3. Radius
 - 4. Stapes

Question ID : 9895803075
Chosen Option : 3

Q.5
1 If $x : y = 6 : 5$ and $z : y = 9 : 25$, then what is the ratio of $x : z$?

- Ans
- 1. 50 : 33
 - 2. 54 : 125
 - 3. 10 : 3
 - 4. 48 : 25

Question ID : 9895804218
Chosen Option : 3

Q.5 If Manoj purchases 324 toffees for ₹ 486, then how many toffees should he sell for ₹ 90 to earn 50% profit?
2

- Ans 1. 40
 2. 60
 3. 55
 4. 45

Question ID : 9895804217
Chosen Option : 3

Q.5 If the length of the diagonal of a square is 14 cm, then what will be area of the square?
3

- Ans 1. 156 cm^2
 2. 196 cm^2
 3. 98 cm^2
 4. 40 cm^2

Question ID : 9895804227
Chosen Option : 1

Q.5 Ravi, Manish and Naveen alone can complete a work in 30 days, 15 days and 10 days respectively. They start the work together but Ravi leaves the work after 2 days of the starting of the work and Manish leaves the work after 3 days more. In how many days Naveen will complete the remaining work?
4

- Ans 1. 3 days
 2. 4 days
 3. 1 day
 4. 2 days

Question ID : 9895804223
Chosen Option : 1

Q.5 A sum of ₹ 10640 gives interest of ₹ 3724 in x years at 5% simple interest. What will be the value of x ?
5

- Ans 1. 8 years
 2. 6 years
 3. 7 years
 4. 9 years

Question ID : 9895804221
Chosen Option : 2

Q.5 The Least Common Multiple and Highest Common Factor of two numbers are 60 and 4 respectively. If their sum is 32, then what will be the difference of these two numbers?
6

- Ans 1. 4
 2. 8
 3. 12

4. 20

Question ID : 9895804208

Chosen Option : 1

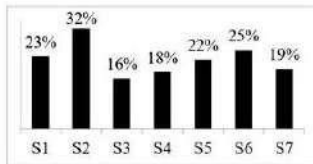
Q.5 After giving a discount of 20%, a shopkeeper earns 36% profit. Marked price is what percent more than the cost price?
7

- Ans 1. 60%
 2. 76%
 3. 68%
 4. 70%

Question ID : 9895804213

Chosen Option : 1

Q.5 The bar chart given below shows the amount of sugar used in making 7 different varieties of sweets S1, S2, S3, S4, S5, S6 and S7 has been shown as a percentage of total weight of the sweet.



The total weight of sweet S3 is 450 kg. What is the amount of sugar used in sweet S3?

- Ans 1. 72 kg
 2. 35 kg
 3. 25 kg
 4. 31 kg

Question ID : 9895804232

Chosen Option : 3

Q.5 The perimeter of a square and a circle are same. If the area of the circle is 2464 cm^2 , then what will be the area of the square?
9

- Ans 1. 1936 cm^2
 2. 2116 cm^2
 3. 1296 cm^2
 4. 1764 cm^2

Question ID : 9895804228

Chosen Option : 3

Q.6 Piyush is running at the speed of 8 km/hr and he stops for 5 minutes to take rest at the end of every third km. What will be the time taken by Piyush to cover a distance of 56 km?
0

- Ans 1. 7 hr
 2. 8 hr 20 minutes
 3. 8 hr
 4. 8 hr 30 minutes

Question ID : 9895804226
Chosen Option : 2

Q.6 If cost price of an article is 30% less than the selling price of that article, then what will be the profit percentage?
1

- Ans
- 1. 37.5%
 - 2. 33.33%
 - 3. 30%
 - 4. 42.86%

Question ID : 9895804216
Chosen Option : 2

Q.6 Height of right circular cylinder is 16 cm. If the diameter of its base is 3.5 cm, then what will be the volume of the
2 cylinder?

- Ans
- 1. 308 cm³
 - 2. 616 cm³
 - 3. 176 cm³
 - 4. 154 cm³

Question ID : 9895804229
Chosen Option : 4

Q.6 Puneet goes to his office at the speed of 60 km/hr and returns to his home at the speed of 90 km/hr. What will be the
3 average speed of Puneet for the whole journey?

- Ans
- 1. 20 m/s
 - 2. 25 m/s
 - 3. 72 m/s
 - 4. 30 m/s

Question ID : 9895804225
Chosen Option : 4

Q.6 If A is 25% less than B, then what will be the value of $(2B - A)/A$?
4

- Ans
- 1. $\frac{5}{4}$
 - 2. $\frac{3}{2}$
 - 3. $\frac{3}{4}$
 - 4. $\frac{5}{3}$


Question ID : 9895804215
Chosen Option : 4

Q.6 A and B starts a business with investment of ₹ 28000 and ₹ 42000 respectively. A invests for 8 months and B invests for one year. If the total profit at the end of year is ₹ 21125, then what is the share of B?

- Ans
- 1. ₹ 14625
 - 2. ₹ 12625
 - 3. ₹ 13575
 - 4. ₹ 14285

Question ID : 9895804220
Chosen Option : 4

Q.6 The line chart given below shows the ratio of imports to exports for a country for 5 consecutive years Y_1, Y_2, Y_3, Y_4 and Y_5 .



If the imports for year Y_5 is ₹ 76000 crore, then what will be exports (in crores) for the year Y_5 ?

- Ans
- 1. ₹ 82000
 - 2. ₹ 80000
 - 3. ₹ 84000
 - 4. ₹ 78000

Question ID : 9895804230
Chosen Option : 4

Q.6
7 What is the value of $\left(\frac{4+2+2-\frac{1}{2} \times \frac{1}{4}}{8-3+\frac{1}{4}+6} \right)$?

- Ans
- 1. $\frac{15}{16}$
 - 2. $\frac{31}{16}$
 - 3. $\frac{19}{16}$
 - 4. $\frac{17}{16}$

Question ID : 9895804210
Chosen Option : 4

Q.6 Sumit, Ravi and Puneet invest ₹ 45000, ₹ 81000 and ₹ 90000 respectively to start a business. At the end of the year the total profit is ₹ 4800. 30% of the total profit gives in charity and rest is divided among them. What will be the share of Sumit?

- Ans
- 1. ₹ 700
 - 2. ₹ 1260

3. ₹ 1310

4. ₹ 1400

Question ID : 9895804219
Chosen Option : 4

Q.6 A sum becomes 6 times of itself in 4 years at compound interest (interest is compounded annually). In how many years
9 will the sum becomes 216 times of itself?

Ans 1. 12

2. 20

3. 16

4. 8

Question ID : 9895804222
Chosen Option : 2

Q.7 A alone can make a chair in 40 days and B alone can make the same chair in 24 days. If A and B are working on
0 alternate days and A work on the first day, then in how many days the chair will be completed?

Ans 1. 34 days

2. 32 days

3. 28 days

4. 30 days

Question ID : 9895804224
Chosen Option : 1

Q.7 The average of 35, 39, 41, 46, 27 and x is 38. What is the value of x ?
1

Ans 1. 44

2. 40

3. 38

4. 42

Question ID : 9895804212
Chosen Option : 1

Q.7
2

The data given below shows the number of people who have saved a certain amount of money.

Savings (in ₹)	Number of people
5	1
15	3
20	4
25	2
30	1
35	1
40	2

What is the median of the given data?

- Ans
- 1. ₹ 17.5
 - 2. ₹ 25
 - 3. ₹ 22.5
 - 4. ₹ 20

Question ID : 9895804214

Chosen Option : 3

Q.7 The average of six numbers N_1, N_2, N_3, N_4, N_5 and N_6 is A. 5 is subtracted from each number. What is the new average?

- Ans
- 1. $A - 30$
 - 2. $A - 10$
 - 3. $A - 6$
 - 4. $A - 5$

Question ID : 9895804211

Chosen Option : 4

Q.7 The line chart given below shows the ratio of imports to exports for a country for 5 consecutive years Y_1, Y_2, Y_3, Y_4 and Y_5 .



Which of the following statement is true?

- Ans
- 1. Exports for year Y_3 are more than the exports for year Y_2 .
 - 2. Imports for year Y_3 are maximum for the given 5 years.
 - 3. Data is Insufficient.
 - 4. Imports for year Y_1 are least for the given 5 years.

Question ID : 9895804231

Chosen Option : 4

5 What is the value of? $6\frac{1}{2} + 80 \div 40 - \frac{30}{7}$ of $(5 - \frac{1}{3})$

Ans

1. $\frac{-21}{2}$

2. $\frac{-17}{2}$

3. $\frac{-23}{2}$

4. $\frac{-13}{19}$

Question ID : 9895804209

Chosen Option : 2

Section : English Language

Q.1 Identify the segment in the sentence which contains the grammatical error from the given options.

The road was blocked since it was in repair.

Ans

1. since it was

2. in repair

3. was blocked

4. The road

Question ID : 9895803725

Chosen Option : 4

Q.2 Select the most appropriate synonym of the given word.

FOYER

Ans

1. Kitchen

2. Verandah

3. Bedroom

4. Lobby

Question ID : 9895803742

Chosen Option : 3

Q.3 Select the word which means the same as the group of words given.

A short speech at the end of a play

Ans

1. Eulogy

2. Prologue

3. Epilogue

4. Chorus

Question ID : 9895803745
Chosen Option : 2

Q.4 Select the correctly spelt word.

Ans 1. Embarrasment

2. Embarrassmment

3. Embarrassment

4. Embarassment

Question ID : 9895803747
Chosen Option : 4

Comprehension:

In the following passage some words have been deleted. Fill in the blanks with the help of the alternatives given.

There is some truth in the common saying that while dogs become attached to persons, cats are generally (1) _____ to places. A dog will follow his master anywhere, but a cat keeps to the (2) _____ it is used to; and even (3) _____ the house changes hand, the cat will remain there, so long as it is _____ treated (4) _____ by the new owners. A cat does not seem to be capable of (5) _____ often shown by a dog. It thinks most of its own comfort.

SubQuestion No : 5

Q.5 Fill in blank (1) with the most appropriate option.

Ans 1. fond

2. attached

3. held

4. stuck

Question ID : 9895803734
Chosen Option : 3

Comprehension:

SubQuestion No : 6

Q.6 Fill in blank (2) with the most appropriate option.

- Ans
- 1. owner
 - 2. lady
 - 3. master
 - 4. house

Question ID : 9895803735
Chosen Option : 4

Comprehension:

In the following passage some words have been deleted. Fill in the blanks with the help of the alternatives given.

There is some truth in the common saying that while dogs become attached to persons, cats are generally (1) _____ to places. A dog will follow his master anywhere, but a cat keeps to the (2) _____ it is used to; and even (3) _____ the house changes hand, the cat will remain there, so long as it is _____ treated (4) _____ by the new owners. A cat does not seem to be capable of (5) _____ often shown by a dog. It thinks most of its own comfort.

SubQuestion No : 7

Q.7 Fill in blank (3) with the most appropriate option.

- Ans
- 1. when
 - 2. wherever
 - 3. then
 - 4. where

Question ID : 9895803736
Chosen Option : 2

Comprehension:

In the following passage some words have been deleted. Fill in the blanks with the help of the alternatives given.

There is some truth in the common saying that while dogs become attached to persons, cats are generally (1) _____ to places. A dog will follow his master anywhere, but a cat keeps to the (2) _____ it is used to; and even (3) _____ the house changes hand, the cat will remain there, so long as it is _____ treated (4) _____ by the new owners. A cat does not seem to be capable of (5) _____ often shown by a dog. It thinks most of its own comfort.

SubQuestion No : 8

Q.8 Fill in blank (4) with the most appropriate option.

- Ans
- 1.

- 2. kindly
- 3. softly
- 4. harshly

Question ID : 9895803737
Chosen Option : 2

Comprehension:

In the following passage some words have been deleted. Fill in the blanks with the help of the alternatives given.

There is some truth in the common saying that while dogs become attached to persons, cats are generally (1) _____ to places. A dog will follow his master anywhere, but a cat keeps to the (2) _____ it is used to; and even (3) _____ the house changes hand, the cat will remain there, so long as it is _____ treated (4) _____ by the new owners. A cat does not seem to be capable of (5) _____ often shown by a dog. It thinks most of its own comfort.

SubQuestion No : 9

Q.9 Fill in blank (5) with the most appropriate option.

- Ans
- 1. loyalty
 - 2. keenness
 - 3. kindness
 - 4. hatred

Question ID : 9895803738
Chosen Option : 3

Q.1 Identify the segment in the sentence which contains the grammatical error from the given options.

They visited the Qutub Minar, which is most attractive spot in Delhi.

- Ans
- 1. attractive spot
 - 2. which is most
 - 3. They visited
 - 4. in Delhi

Question ID : 9895803723
Chosen Option : 1

Q.1 Select the most appropriate word to fill in the blank.

The _____ of the museum showed us some ancient coins.

- Ans
- 1. controller
 - 2. conservator

3. collector

4. curator

Question ID : 9895803731

Chosen Option : 4

Q.1
2 Select the correctly spelt word.

Ans 1. Hierarchy

2. Hierarky

3. Hierarchy

4. Hirarchy

Question ID : 9895803748

Chosen Option : 4

Q.1
3 Select the most appropriate option to substitute the underlined segment in the given sentence. If there is no need to substitute it, select No improvement.

The movie Uri tells the story of a surgical strike by the Indian army towards militants in POK.

Ans 1. for militants in POK

2. No improvement.

3. against militants in POK

4. over militants at POK

Question ID : 9895803726

Chosen Option : 3

Q.1
4 Fill in the blanks with the most appropriate words.

_____ taught you such lessons as these?

Ans 1. What

2. Which

3. Whom

4. Who

Question ID : 9895803730

Chosen Option : 4

Q.1
5 Select the most appropriate word to fill in the blank.

They showed her the greatest _____.

Ans 1.

2. tribute

3. honour

4. respect

Question ID : 9895803732
Chosen Option : 3

Q.1
6 Select the most appropriate meaning of the given idiom.

Cutting corners

Ans 1. Spending too much money

2. Saving money

3. Making money

4. Lending money

Question ID : 9895803744
Chosen Option : 2

Q.1
7 Select the most appropriate option to substitute the underlined segment in the given sentence. If there is no need to substitute it, select No improvement.

The questions are so simple that a child can understand it.

Ans 1. can understand them

2. No improvement.

3. is understanding them

4. can understand this

Question ID : 9895803727
Chosen Option : 3

Q.1
8 Select the most appropriate synonym of the given word.

FRUITFUL

Ans 1. Useless

2. Productive

3. Barren

4. Juicy

Question ID : 9895803741
Chosen Option : 4

Q.1
9 Select the most appropriate antonym of the given word.

LENIENT

- Ans
- 1. Generous
 - 2. Helpful
 - 3. Strict
 - 4. Defensive

Question ID : 9895803740
Chosen Option : 2

Q.2
0 Identify the segment in the sentence which contains the grammatical error from the given options.

She complained about her weak eyes and lamented about the necessity from spectacles.

- Ans
- 1. lamented about
 - 2. from spectacles
 - 3. She complained
 - 4. her weak eyes

Question ID : 9895803724
Chosen Option : 2

Q.2
1 Select the most appropriate meaning of the given idiom.

A blessing in disguise

- Ans
- 1. A hidden misfortune
 - 2. An apparent fortune
 - 3. An apparent blessing
 - 4. A hidden favour

Question ID : 9895803743
Chosen Option : 3

Q.2
2 Select the most appropriate antonym of the given word.

CONVEX

- Ans
- 1. Opaque
 - 2. Dense
 - 3. Concave
 - 4. Transparent

Question ID : 9895803739
Chosen Option : 2

Q.2
3

Select the word which means the same as the group of words given.

A song written in the praise of God

- Ans 1. Hymn
 2. Elegy
 3. Ode
 4. Epic

Question ID : 9895803746
Chosen Option : 1

Q.2
4 Fill in the blanks with the most appropriate words.

Shakespeare _____ this play.

- Ans 1. write
 2. is writing
 3. has been writing
 4. wrote

Question ID : 9895803729
Chosen Option : 2

Q.2
5 Select the most appropriate option to substitute the underlined segment in the given sentence. If there is no need to substitute it, select No improvement.

The furniture in this room are old and need to be replaced.

- Ans 1. No improvement.
 2. is old and needs
 3. is old and need
 4. are old and needing

Question ID : 9895803728
Chosen Option : 1

Section : Hindi Language

Comprehension:

दिए गए अनुच्छेद में कुछ शब्द हटा दिए गए हैं। दिए गए विकल्पों की सहायता से रिक्त स्थान भरें। प्रत्येक संख्या के लिए सबसे उपयुक्त विकल्प का चयन करें।

सफलता की देवी तिलक करने से पहले _____ (1) लेती है। वह उसी माथे पर _____ (2) करती है, जो श्रम की बूंदों से _____ (3) होता है। जो व्यक्ति श्रम से कतराते हैं और कर्तव्य से विमुख होते हैं वे विशेष सुविधा की _____ (4) करते हैं। उनके सपने कभी भी सफलता में परिणत नहीं हो सकते। इसलिए समय के देवता का सम्मान करने के लिए हर _____ (5) को अवसर बनाना तथा समय नियोजन करना आवश्यक है।

SubQuestion No : 1

Q.1 गद्यांश में संकेतित रिक्त स्थान (1) के लिए उपयुक्त शब्द होगा:

- Ans
- 1. परीक्षा
 - 2. तिलक
 - 3. पैसा
 - 4. भाग

Question ID : 9895803477

Chosen Option : --

Comprehension:

दिए गए अनुच्छेद में कुछ शब्द हटा दिए गए हैं। दिए गए विकल्पों की सहायता से रिक्त स्थान भरें। प्रत्येक संख्या के लिए सबसे उपयुक्त विकल्प का चयन करें।

सफलता की देवी तिलक करने से पहले _____ (1) लेती है। वह उसी माथे पर _____ (2) करती है, जो श्रम की बूंदों से _____ (3) होता है। जो व्यक्ति श्रम से कतराते हैं और कर्तव्य से विमुख होते हैं वे विशेष सुविधा की _____ (4) करते हैं। उनके सपने कभी भी सफलता में परिणत नहीं हो सकते। इसलिए समय के देवता का सम्मान करने के लिए हर _____ (5) को अवसर बनाना तथा समय नियोजन करना आवश्यक है।

SubQuestion No : 2

Q.2 गद्यांश में संकेतित रिक्त स्थान (2) के लिए उपयुक्त शब्द होगा:

- Ans
- 1. समय
 - 2. क्षेत्र
 - 3. आँखें
 - 4. तिलक

Comprehension:

दिए गए अनुच्छेद में कुछ शब्द हटा दिए गए हैं। दिए गए विकल्पों की सहायता से रिक्त स्थान भरें। प्रत्येक संख्या के लिए सबसे उपयुक्त विकल्प का चयन करें।

सफलता की देवी तिलक करने से पहले _____ (1) लेती है। वह उसी माथे पर _____ (2) करती है, जो श्रम की बूंदों से _____ (3) होता है। जो व्यक्ति श्रम से कतराते हैं और कर्तव्य से विमुख होते हैं वे विशेष सुविधा की _____ (4) करते हैं। उनके सपने कभी भी सफलता में परिणत नहीं हो सकते। इसलिए समय के देवता का सम्मान करने के लिए हर _____ (5) को अवसर बनाना तथा समय नियोजन करना आवश्यक है।

SubQuestion No : 3

Q.3 गद्यांश में संकेतित रिक्त स्थान (3) के लिए उपयुक्त

शब्द होगा:

- Ans
- 1. लगा
 - 2. मूल्य
 - 3. भीगा
 - 4. प्रयोग

Comprehension:

दिए गए अनुच्छेद में कुछ शब्द हटा दिए गए हैं। दिए गए विकल्पों की सहायता से रिक्त स्थान भरें। प्रत्येक संख्या के लिए सबसे उपयुक्त विकल्प का चयन करें।

सफलता की देवी तिलक करने से पहले _____ (1) लेती है। वह उसी माथे पर _____ (2) करती है, जो श्रम की बूंदों से _____ (3) होता है। जो व्यक्ति श्रम से कतराते हैं और कर्तव्य से विमुख होते हैं वे विशेष सुविधा की _____ (4) करते हैं। उनके सपने कभी भी सफलता में परिणत नहीं हो सकते। इसलिए समय के देवता का सम्मान करने के लिए हर _____ (5) को अवसर बनाना तथा समय नियोजन करना आवश्यक है।

SubQuestion No : 4

Q.4 गद्यांश में संकेतित रिक्त स्थान (4) के लिए उपयुक्त

शब्द होगा:

- Ans
- 1.

- 2. व्यय
- 3. महत्त्व
- 4. सामने

Question ID : 9895803480
Chosen Option : --

Comprehension:

दिए गए अनुच्छेद में कुछ शब्द हटा दिए गए हैं। दिए गए विकल्पों की सहायता से रिक्त स्थान भरें। प्रत्येक संख्या के लिए सबसे उपयुक्त विकल्प का चयन करें।

सफलता की देवी तिलक करने से पहले _____ (1) लेती है। वह उसी माथे पर _____ (2) करती है, जो श्रम की बूंदों से _____ (3) होता है। जो व्यक्ति श्रम से कतराते हैं और कर्तव्य से विमुख होते हैं वे विशेष सुविधा की _____ (4) करते हैं। उनके सपने कभी भी सफलता में परिणत नहीं हो सकते। इसलिए समय के देवता का सम्मान करने के लिए हर _____ (5) को अवसर बनाना तथा समय नियोजन करना आवश्यक है।

SubQuestion No : 5

Q.5 गद्यांश में संकेतित रिक्त स्थान (5) के लिए उपयुक्त शब्द होगा:

- Ans
- 1. आलस्य
 - 2. क्षण
 - 3. भूख
 - 4. संसार

Question ID : 9895803481
Chosen Option : --

Q.6 निम्नलिखित में से उस विकल्प का चयन करें जो ' आँखों में धूल झोंकना ' मुहावरे का अर्थ व्यक्त करता है।

- Ans
- 1. आँखों से धूल उड़ाना
 - 2. घायल करना
 - 3. धोखा देना
 - 4. अपमानित करना

Question ID : 9895803487
Chosen Option : --

Q.7 दिए गए शब्द के पर्यायवाची शब्द का चयन करें।

अमृत

Ans

1. पीयूष
- ✓ 2. नीर
- ✗ 3. विष
- ✗ 4. रस

Question ID : 9895803485
Chosen Option : --

Q.8 दिये गये वाक्यांश के लिए एक शब्द दीजिये।

जो देखने में प्रिय लगे

Ans

- ✗ 1. प्रियंवदा
- ✗ 2. प्रियसखी
- ✓ 3. प्रियदर्शी
4. प्रियांशु

Question ID : 9895803489
Chosen Option : --

Q.9 दिए गए वाक्य में रेखांकित खंड को प्रतिस्थापित करने के लिए सबसे उपयुक्त विकल्प का चयन करें।

जैसे ही मैंने शेर देखा, डर के मारे मेरा तो प्राण निकल गया।

Ans

- ✗ 1. मेरे तो प्राण निकल गया।
- ✗ 2. प्राण मेरे तो निकल गए।
- ✓ 3. मेरे तो प्राण निकल गए।
- ✗ 4. मेरा तो प्राण निकल गयी।

Question ID : 9895803468
Chosen Option : --

Q.1 दिये गये वाक्यांश के लिए एक शब्द दीजिये।

अपनी हत्या करने वाला

Ans

- ✗ 1. मित्रघाती
- ✓ 2. पराघाती
- ✗ 3. आत्मघाती
- ✗ 4. सर्वघाती

Question ID : 9895803488
Chosen Option : --

दिए गए वाक्य में रेखांकित खंड को प्रतिस्थापित करने के लिए सबसे उपयुक्त विकल्प का चयन करें। मेरे दादाजी की चित्र बहुत पुराना है। यह चित्र मुझे बहुत प्रिय है।

Ans

1. चित्र बहुत पुराना दादाजी को है।
2. दादाजी का चित्र बहुत पुरानी है।
3. दादाजी का चित्र बहुत पुराना है।
4. दादाजी की चित्र बहुत पुरानी है।

Question ID : 9895803471

Chosen Option : --

Q.1 2 दिए गए शब्द का विलोम चुनें।

आदान

Ans

1. ग्रहण
2. नादान
3. प्रदान
4. निदान

Question ID : 9895803483

Chosen Option : --

Q.1 3 दिए गए वाक्य में रेखांकित खंड को प्रतिस्थापित करने के लिए सबसे उपयुक्त विकल्प का चयन करें।

दुविधा आत्मविश्वास को सबसे बड़ी शत्रु है क्योंकि दुविधा एकाग्रता को नष्ट कर देती है।

Ans

1. दुविधा आत्मविश्वास की सबसे बड़ा शत्रु है
2. दुविधा आत्मविश्वास की सबसे बड़ी शत्रु है
3. दुविधा आत्मविश्वास का सबसे बड़ी शत्रु है
4. दुविधा आत्मविश्वास के सबसे बड़ी शत्रु है

Question ID : 9895803469

Chosen Option : --

Q.1 4 दिए गए वाक्य का वह भाग जात करें जिसमें कोई त्रुटि है। भारत की संस्कृति कृषक-संस्कृति है और भारतीय किसान बड़ा कठोरता जीवन जीता है।

Ans

1. और भारतीय किसान
2. कृषक-संस्कृति है।
3. भारत की संस्कृति
4. बड़ा कठोरता जीवन जीता है।

Question ID : 9895803467
Chosen Option : --

Q.1
5 सही वर्तनी वाले शब्द का चयन करें।

- Ans
- 1. प्रतिवर्श
 - 2. प्रतिबर्ष
 - 3. प्रतिवर्ष
 - 4. परतीवर्ष

Question ID : 9895803491
Chosen Option : --

Q.1
6 दिए गए शब्द का विलोम चुनें।

आदि

- Ans
- 1. आरम्भ
 - 2. अनादि
 - 3. आबादी
 - 4. बर्बादी

Question ID : 9895803482
Chosen Option : --

Q.1
7 रिक्त स्थान को भरने के लिए सबसे उपयुक्त शब्द का चयन करें। विकास _____ कमाने वाला सदस्य है।

- Ans
- 1. कहाँ
 - 2. घर
 - 3. विदेश
 - 4. एकमात्र

Question ID : 9895803473
Chosen Option : --

Q.1
8 दिए गए वाक्य में रेखांकित खंड को प्रतिस्थापित करने के लिए सबसे उपयुक्त विकल्प का चयन करें।

बक्ताओं ने श्रोताओं की मन मोह लिया।

- Ans
- 1. श्रोताओं को मन मोह लिया।
 - 2. श्रोताओं के मन मोह लिया।
 - 3. श्रोताओं का मन मोह लिया।
 - 4. श्रोताओं से मन मोह लिया।

Question ID : 9895803470
Chosen Option : --

Q.1 रिक्त स्थान को भरने के लिए सबसे उपयुक्त शब्द का चयन करें। कोयल _____ रही है।

- Ans
- 1. महक
 - 2. बहक
 - 3. कूक
 - 4. भौंक

Question ID : 9895803474

Chosen Option : --

Q.2 निम्नलिखित में से उस विकल्प का चयन करें जो ' अकल पर पत्थर पड़ना ' मुहावरे का अर्थ व्यक्त करता है।

- Ans
- 1. अकल को पत्थर पर रखना
 - 2. अकल को पत्थर से मारना
 - 3. बुद्धि भ्रष्ट हो जाना
 - 4. घायल होना

Question ID : 9895803486

Chosen Option : --

Q.2 रिक्त स्थान को भरने के लिए सबसे उपयुक्त शब्द का चयन करें। जैसे ही अध्यापक महोदय आए, कक्षा _____ हो गई।

- Ans
- 1. जंगली
 - 2. शांत
 - 3. भक्त
 - 4. पागल

Question ID : 9895803475

Chosen Option : --

Q.2 रिक्त स्थान को भरने के लिए सबसे उपयुक्त शब्द का चयन करें। मीनाक्षी को अपने किए की _____ मिलेगी।

- Ans
- 1. कुल्हाड़ी
 - 2. गुड़िया
 - 3. पुरस्कार
 - 4. सजा

Question ID : 9895803472

Chosen Option : --

Q.2 दिए गए शब्द के पर्यायवाची शब्द का चयन करें।

प्रख्यात

Ans

- 1. प्रसिद्ध
- 2. विमुख
- 3. हस्ती
- 4. शोणित

Question ID : 9895803484

Chosen Option : --

Q.2
4 सही वर्तनी वाले शब्द का चयन करें।

- Ans
- 1. गगनचोबी
 - 2. गगनचुंभी
 - 3. गगनचुंबी
 - 4. गगनचूंबी

Question ID : 9895803490

Chosen Option : --

Q.2
5 दिए गए वाक्य का वह भाग जात करें जिसमें कोई ब्रुटि है। लगन के साथ अगर को परिश्रम जोड़ दिया जाए तो असंभव कार्य भी संभव हो जाती है।

- Ans
- 1. अगर परिश्रम को जोड़ दिया जाए तो
 - 2. संभव हो जाती है।
 - 3. असंभव कार्य भी
 - 4. लगन के साथ

Question ID : 9895803466

Chosen Option : --