

## Constable (GD) in CAPFs, NIA, SSF and Rifleman (GD) in Assam Rifles Examination, 2018

Roll No. :	
Registration No.	
Name :	
Exam Venue :	iON Digital Zone iDZ Ward No 1
Exam Time :	9:00 AM - 10:30 AM
Exam Date :	11/03/2019

Section : **General Section**

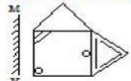
**Q.1** J, A, G, E, V and F are sitting around a round table facing the centre. F is to the left of G, who is opposite A, V is between A and J. Who is to the left of E?

- Ans
- 1. V
  - 2. G
  - 3. A
  - 4. F

Question ID : 9895809332  
Chosen Option : 2

**Q.2** Which of the answer figure is exactly the mirror image of the given figure, when the mirror is placed on the line MN?

**Question figure**



- Ans
- 1.
  - 2.
  - 3.
  - 4.

Question ID : 9895809345  
Chosen Option : 4

**Q.3**

The statements below are followed by two conclusions labeled I and II. Assuming that the information in the statements is true, even if it appears to be at variance with generally established facts, decide which conclusion(s) logically and definitely follow(s) from the information given in the statements.

Statement

1. All cans are jars.
2. No tins are cans.

Conclusion

- I. Some jars are tins.
- II. All tins are jars.

- Ans  1. Both I and II follow  
 2. Neither I nor II follows  
 3. Only conclusion II follows  
 4. Only conclusion I follows

Question ID : 9895809334  
Chosen Option : 1

Q.4 In a certain code, ADMIT is coded as BFPMY, then how is CARD coded in the same way?

- Ans  1. DUCH  
 2. DCHU  
 3. DCUH  
 4. UCDH

Question ID : 9895809329  
Chosen Option : 3

Q.5 G, H, I, J and K are sitting in a row. J is neither next to H nor K. J is NOT at the end. H is to the left of G. Who is to the left of K?

- Ans  1. J  
 2. H  
 3. I  
 4. G

Question ID : 9895809331  
Chosen Option : 4

Q.6 Select the option that is related to the third term in the same way as the second term is related to the first term.

Kangaroo : Hopping :: snake : \_\_\_\_\_

- Ans  1. Bite  
 2. Walking  
 3. Crawling  
 4. Scrolling

Question ID : 9895809326  
Chosen Option : 1

Q.7 Select the correct option that will fill in the blank and complete the series.

0.25, 1, \_\_\_\_\_, 4, 6.25, 9

- Ans 1.

- 2.
- 3. 2.75
- 4. 3  2

Question ID : 9895809336  
Chosen Option : 1

Q.8

Select the related word pair from the given alternatives.

- Ans
- 1. Heart : Hematology
  - 2. Flower : Floriculture
  - 3. Human behavior : Meteoricists
  - 4. Universe : Cosmology

Question ID : 9895809327  
Chosen Option : 1






Q.9

- Ans
- 1. 26147 EAT is written as 62149 and FINAL as 53047, how will REGAL be written?
  - 2. 21647
  - 3. 22471
  - 4. 22674

Question ID : 9895809330  
Chosen Option : 2

Q.1  
0

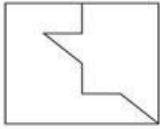
A figure marked on transparent sheet is given and followed by four answer figures, one out of these four options resembles the figure, which is obtained by folding transparent sheet along the dotted line. This option is your answer.

- Question Figures:
- Ans
- 1. 
  - 2. 
  - 3. 
  - 4. 
- 

Question ID : 9895809346  
Chosen Option : 2

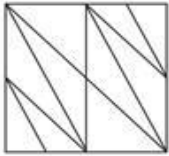
Q.1  
1

Choose the option figure in which the problem figure is hidden/embedded.

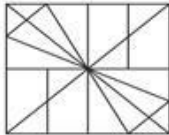


Ans

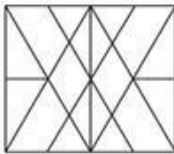
1.



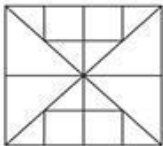
2.



3.



4.



Question ID : 9895809344  
Chosen Option : 3

Q.1 Four options have been given out of which three are alike in some manner, while one is different. Choose the odd one.

2

Ans  1. 2321

2. 825

3. 1521

4. 968

Question ID : 9895809339  
Chosen Option : 4

Q.1 Select the correct option that will fill in the blank and complete the series.

3

AA, BD, CI, DP, \_\_\_\_\_

Ans  1. EY

2. FR

3. ER

4. FY

Question ID : 9895809323  
Chosen Option : 2

Q.1 Sonu is taller than Yatendra, Amit is taller than Sonu. Subhash is taller than Amit. Sattu is tallest of all. If they stand according to their height who will be exactly in the middle?

4

Ans  1. Sonu

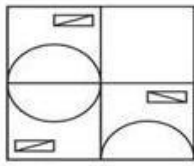
2. Subhash

3. Yatendra

✓ 4. Amit

Question ID : 9895809333  
Chosen Option : 4

Q.1  
5 Which of the following answer figure will complete the given figure?

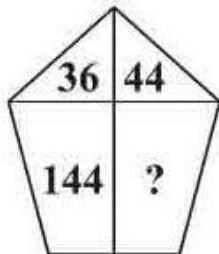


Ans



Question ID : 9895809343  
Chosen Option : 2

Q.1  
6 Find the missing number from the below options.



Ans ✓ 1. 176

✗ 2. 154

✗ 3. 179

✗ 4. 183

Question ID : 9895809340  
Chosen Option : 2

Q.1  
7 In the question two statements are given, followed by three conclusions, I, II and III. Assuming that the information in the statements is true, even if it appears to be at variance with generally established facts, decide which conclusion(s) logically and definitely follow(s) from the information given in the statements.

Statement

1. Some hills are dunes.
2. No dunes are mountains.

Conclusion

- I. Some dunes are hills.
- II. Some mountains are hills.
- III. All hills are mountains.

Ans

- 1. Only conclusion III follows
- 2. Only conclusion I follows
- 3. Only conclusion I and III follows
- 4. All conclusions I, II and III follow

Question ID : 9895809335  
Chosen Option : 3

Q.1 Select the correct combination of mathematical signs to replace '\*\*' signs and to balance the given equation:  
8

$$44 * 6 * 12 * 3 * 20$$

- Ans
- 1. - + × =
  - 2. × ÷ + =
  - 3. ÷ × + =
  - 4. - × ÷ =

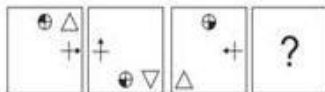
Question ID : 9895809341  
Chosen Option : 4

Q.1 Four letter clusters have been given, out of which three are alike in some manner, while one is different. Choose the odd one.  
9

- Ans
- 1. GCE
  - 2. PLN
  - 3. SJL
  - 4. JFH

Question ID : 9895809324  
Chosen Option : 3

Q.2 Choose the option which completes the given figure series  
0



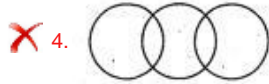
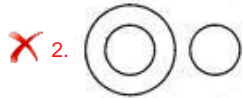
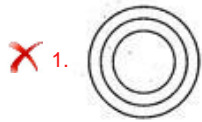
- Ans
- 1.
  - 2.
  - 3.
  - 4.

Question ID : 9895809342  
Chosen Option : 4

Q.2 Select the Venn diagram that best illustrates the relationship between the three given classes.  
1

Bachelor, Married, Person

Ans



Question ID : 9895809347  
Chosen Option : 4

Q.2 Four words have been given, out of which three are alike in some manner, while one is different. Choose the odd one.  
2

- Ans
1. Quill
  2. Esophagus
  3. Cranium
  4. Nasal bone

Question ID : 9895809325  
Chosen Option : 4

Q.2 Select the correct option that will fill in the blank and complete the series.  
3

32, 144, \_\_\_\_\_, 2916, 13122, 59049

- Ans
1. 846
  2. 684
  3. 648
  4. 864

Question ID : 9895809337  
Chosen Option : 2

Q.2 Select the option that is related to the third term in the same way as the second term is related to the first term.  
4

GHI : LKJ :: STU : ?

- Ans
1. ZXY
  2. XWV
  3. WVX
  4. UTV

Question ID : 9895809328  
Chosen Option : 2

Q.2 Select the option that is related to the Third term in the same way as the second term is related to the first term.  
5

22 : 333 :: 4444 : \_\_\_\_\_

- Ans
1. 5555
  2. 55555

3.

4. 55

Question ID : 9895809338  
Chosen Option : 2

Q.2  
6 The Chauri Chaura incident happened in the modern state of:

- Ans  1. Uttar Pradesh  
 2. Delhi  
 3. Kerala  
4. Madhya Pradesh

Question ID : 9895809522  
Chosen Option : 1

Q.2  
7 Extrusive rocks are a type of:

- Ans 1. Sedimentary rocks  
 2. Fossil rocks  
3. Metamorphic rocks  
4. Igneous rocks

Question ID : 9895809517  
Chosen Option : 1

Q.2  
8 Which of the following suggestions to the Government about commercial lawsuits is indicated within the 2017-18 economic survey of India?

- Ans  1. Should not make any changes in the number of lawsuits  
 2. Should increase the number of lawsuits  
3. Should reduce the pendency of lawsuits  
 4.  
Should appoint a committee to examine the number of lawsuits they file

Question ID : 9895809509  
Chosen Option : 2

Q.2  
9 All living organisms are classified into \_\_\_\_\_ kingdoms under the system proposed by Whittaker (1969).


- Ans  1. Seven  
 2. Five  
 3. One  
 4. Three

Question ID : 9895809512  
Chosen Option : 2

Q.3  
0 The 2017 Sahitya Academy award for Malayalam was won by:

- Ans  1. K. P Ramanunni  
 2.  
 3. Prabha Varma






 4. Oomen Chandy

Question ID : 9895809503  
Chosen Option : 2

Q.3 The Finance Commission in India is constituted by the \_\_\_\_\_ under article 280 of the Constitution.

1

- Ans
-  1. Supreme Court
  -  2. Parliament
  -  3. Prime Minister
  -  4. President

Question ID : 9895809506  
Chosen Option : 1

Q.3 The only Indian Prime Minister to die outside India is:





2

- Ans
-  1. Indira Gandhi
  -  2. Lal Bahadur Shastri
  -  3. Morarji Desai
  -  4. Jawaharlal Nehru

Question ID : 9895809505  
Chosen Option : 2

Q.3 In the central government budget, the annual financial statement shows:





3

- Ans
-  1.  
The estimated money that has been earned by State Government of India
  -  2.  
The estimated receipts and expenditures of the Government of India
  -  3.  
The estimated money that has been spent by the Zilla Parishad
  -  4.  
The estimated receipts and expenditures of the individual states

Question ID : 9895809510  
Chosen Option : 2

Q.3 An instrument called the \_\_\_\_\_ measures the electric current in a circuit.



4

- Ans
-  1. Ammeter
  -  2. Ohmmeter
  -  3. Thermometer
  -  4. Gyroscope

Question ID : 9895809516  
Chosen Option : 1

Q.3 \_\_\_\_\_ is the mark of quality for all industrial products in India.

5

- Ans
-  1. Agmark
  -  2. ISI

3.

4. Ecomark

Question ID : 9895809511  
Chosen Option : 2

Q.3  
6 In the 2016 Olympics, \_\_\_\_\_ won the men's 100-meter sprint gold.

Ans  1. Jesse De Grasse

2. Usain Bolt

3. William Blake

4. Justin Gatlin

Question ID : 9895809501  
Chosen Option : 2

Q.3  
7 In India, the growth of anti-colonial movement led to:

Ans  1. Sectarianism

2. Conflict

3. Diversity

4. Unity

Question ID : 9895809521  
Chosen Option : 2

Q.3  
8 The Ajodhya Hills is located in:

Ans  1. Uttar Pradesh

2. Kerala

3. Madhya Pradesh

4. West Bengal

Question ID : 9895809500  
Chosen Option : 4

Q.3  
9 Kud is a form of dance from the state of \_\_\_\_\_.

Ans  1. Jammu and Kashmir

2. Gujarat

3. West Bengal

4. Kerala

Question ID : 9895809499  
Chosen Option : 3

Q.4  
0 \_\_\_\_\_ won the women's title in the 2018 US Open Tennis Championship finals.

Ans 1. Martina Hingis

2. Naomi Osaka

3. Serena Williams

4. Venus Williams

Question ID : 9895809502

Chosen Option : 2

Q.4  
1

Ans

1. Silicon  
The property of Catenation is most readily predominant in:
2. Nitrogen
3. Carbon
4. Sulphur

Question ID : 9895809513

Chosen Option : 2

Q.4  
2

Ans

1. Kuchipudi  
The precursor to the famous Odissi dance is:
2. Bhangra
3. Bharatanatyam
4. Gotipua

Question ID : 9895809498

Chosen Option : 4

Q.4  
3

Ans

1. Only living organisms  
The ecosystem consists of:
2. Living organisms and physical factors
3. Only insects
4. Only physical factors

Question ID : 9895809518

Chosen Option : 2

Q.4  
4

Ans

1. Acidic  
Sour tasting food is \_\_\_\_\_ in nature.
2. Neutral
3. Basic
4. Alkaline

Question ID : 9895809514

Chosen Option : 2

Q.4  
5

Ans

1. Lord Hastings  
The system of Government in Bengal was the brainchild of \_\_\_\_\_.
2. Lord Ripon
3. Lord Clive
- 4.

Lord Cornwallis

Question ID : 9895809520

Q.4  
6 The Eighth Schedule of the Indian Constitution includes \_\_\_\_\_ languages.

- Ans
- 1. 22
  - 2. 25
  - 3. 2
  - 4. 100

Question ID : 9895809508  
Chosen Option : 2

Q.4  
7 Humans normally have \_\_\_\_\_ number of pairs of autosomes.

- Ans
- 1. 10
  - 2. 21
  - 3. 20
  - 4. 22

Question ID : 9895809515  
Chosen Option : 2

Q.4  
8 A good measure of biodiversity of an area is:

- Ans
- 1. The number of animals found there
  - 2. The number of trees found there
  - 3. The number of people found there
  - 4. The number of species found there

Question ID : 9895809519  
Chosen Option : 2

Q.4  
9 The union territories of India have been created because they are:

- Ans
- 1. Too small to be a state
  - 2. Have too many people to be a state
  - 3. Extremely large
  - 4. Too big to be a state

Question ID : 9895809507  
Chosen Option : 2

Q.5  
0 What was the time period of the most recent term served by the former Chief Economic Advisor, Arvind Subramanian?

- Ans
- 1. 2014-2018
  - 2. 2014-2017
  - 3. 2009-2014
  - 4. 2014-2016

Question ID : 9895809504  
Chosen Option : 2

- Ans  1. 100 km/hr  
 2. 120 km/hr  
 3. 110 km/hr  
 4. 90 km/hr

Question ID : 9895809693  
Chosen Option : 2

Q.5  
2 The mean of 23, 45, 64, 81 and 77 is:

- Ans  1. 56  
 2. 58  
 3. 54  
 4. 52

Question ID : 9895809679  
Chosen Option : 4

Q.5  
3 The listed price of a product is ₹ 500. What shall be the sale price after successive discounts of 10% and 10%?

- Ans  1. ₹ 450  
 2. ₹ 425  
 3. ₹ 400  
 4. ₹ 405

Question ID : 9895809678  
Chosen Option : 1

Q.5  
4 A and C, B and C and A, B and C can complete a work in 20, 12 and 8 days respectively. In how many days A and B together can complete that work?

- Ans  1.  $\frac{65}{7}$  days  
 2.  $\frac{41}{3}$  days  
 3.  $\frac{71}{3}$  days  
 4.  $\frac{60}{7}$  days

Question ID : 9895809692  
Chosen Option : 2

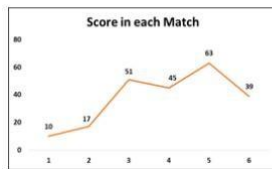
Q.5  
5 A batsman scored 120 runs which included 15 fours and 2 sixes. What percent of runs scored by him running between the wickets?

- Ans  1. 40%  
 2. 35%  
 3. 37.50%  
 4. 25%

Question ID : 9895809681  
Chosen Option : 1

Q.5  
6

The line graph shows the scores of a batsman in 6 matches. In how many matches was his performance better than the previous match?



- Ans
- 1. 2
  - 2. 4
  - 3. 3
  - 4. 1

Question ID : 9895809695  
Chosen Option : 1

Q.5  
7 If  $a : b = 2 : 3$ ,  $b : c = 5 : 6$  and  $c : d = 8 : 9$ , then  $a : d = ?$

- Ans
- 1. 42 : 81
  - 2. 44 : 81
  - 3. 37 : 81
  - 4. 40 : 81

Question ID : 9895809686  
Chosen Option : 2

Q.5  
8 The value of:

$4 \div 2 + 3 \times 6 - 7$  is:

- Ans
- 1. 13
  - 2. 14
  - 3. 11
  - 4. 12

Question ID : 9895809675  
Chosen Option : 1

Q.5  
9 The difference between simple and compound interests compounded annually, on a certain sum of money for 2 years at 6% pa is ₹ 3.6. What is the sum?

- Ans
- 1. ₹ 800
  - 2. ₹ 750
  - 3. ₹ 1,000
  - 4. ₹ 1,250

Question ID : 9895809677  
Chosen Option : 2

Q.6  
0



The pie charts shows the percentage market share of different companies in the market for the year 2017 and 2018. The total sale increased from 150 crores to 225 crores during 2017 to 2018. What is the ratio of sales of Company D in the year 2018 to its sales in the year 2017?

- Ans  1. 16 : 21  
 2. 21 : 16  
 3. 27 : 20  
 4. 20 : 27

Question ID : 9895809697  
Chosen Option : 1

Q.6 An article was bought for ₹ 400 and a repairing charge of ₹ 50 was paid on it. It is sold at a profit of 20%, after a discount of 10% on its marked price. The marked price is:

- Ans  1. ₹ 540  
 2. ₹ 640  
 3. ₹ 580  
 4. ₹ 600

Question ID : 9895809683  
Chosen Option : 2

Q.6 The ratio of two numbers is 4 : 5 and the sum of their cubes is 1512. The square of their difference is:

- Ans  1. 2.25  
 2. 4  
 3. 2  
 4. 1

Question ID : 9895809684  
Chosen Option : 1

Q.6 A right triangle contains the right angle between the sides 5 cm and 7 cm. A cone is generated by revolving about the side 5 cm. The volume of this cone is:

- Ans  1.  $51\frac{2}{3}\pi\text{ cm}^3$   
 2.  $71\frac{2}{3}\pi\text{ cm}^3$   
 3.  $81\frac{2}{3}\pi\text{ cm}^3$   
 4.  $61\frac{2}{3}\pi\text{ cm}^3$

Question ID : 9895809690  
Chosen Option : 1

Q.6 A can complete a task in 8 days and B in 16 days respectively. If they work together for 3 days, then the remaining part of the work left is:

- Ans  1.  $\frac{5}{16}$   
 2.  $\frac{9}{16}$   
 3.  $\frac{7}{16}$   
 4.  $\frac{11}{16}$

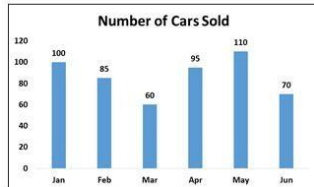
Question ID : 9895809691  
Chosen Option : 1

Q.6  
5 A and B together have ₹ 1800. If  $\frac{4}{3}$  of A's amount is equal to  $\frac{2}{3}$  of B's amount, how much does B have?

- Ans
- 1. ₹ 1200
  - 2. ₹ 900
  - 3. ₹ 750
  - 4. ₹ 600

Question ID : 9895809685  
Chosen Option : 2

Q.6  
6 The bar graph shows the number of cars sold by a distributor in each month from January to June. How many more cars did he sell in the second quarter as compared to the first?



- Ans
- 1. 20
  - 2. 25
  - 3. 10
  - 4. 30

Question ID : 9895809696  
Chosen Option : 2

Q.6  
7 A hollow iron pipe is 10 cm long and its external diameter is 18 cm. If the thickness of the pipe is 2 cm and iron weighs 8.5 g/cm<sup>3</sup>, then the weight of the pipe from the following is closest to:

- Ans
- 1. 8.54 kg
  - 2. 9.54 kg
  - 3. 7.54 kg
  - 4. 5.54 kg

Question ID : 9895809688  
Chosen Option : 2

Q.6  
8 In the first 20 overs of a cricket game, the average run rate was 5.50, what should be the required average run rate in the remaining 30 overs to achieve a target of 290 runs?

- Ans
- 1. 5.75
  - 2. 6.5
  - 3. 6
  - 4. 6.25

Question ID : 9895809673  
Chosen Option : 3

Q.6  
9 A sum of money at simple interest amounts to ₹ 400 in 4 years and ₹ 420 in 5 years. What is the sum?

- Ans
- 1. ₹ 340
  - 2. ₹ 220
  - 3. ₹ 320
  - 4. ₹ 200



Question ID : 9895809687  
Chosen Option : 2

Q.7 220 articles dropped in a water tank which is 52 m long and 47 m broad. If the average displacement of water by an article is  $4.5 \text{ m}^3$ , then approximate rise in the water level will be:

- Ans  1. 40.5 cm  
 2. 20.5 cm  
 3. 12.5 cm  
 4. 30.5 cm

Question ID : 9895809689  
Chosen Option : 2

Q.7 x buys a scooter for ₹ 40,000 and spends ₹ 5,000 on its repair. He sells it for ₹ 54,000. What is the gain percent?

- Ans  1. 12.50%  
 2. 20%  
 3. 25%  
 4. 15%

Question ID : 9895809682  
Chosen Option : 3

Q.7 The average age of husband, wife and their child 4 years ago was 26 years and that of wife and child 3 years ago was 22 years. What is the present age of the husband?

- Ans  1. 44 years  
 2. 46 years  
 3. 42 years  
 4. 40 years

Question ID : 9895809674  
Chosen Option : 4

Q.7 What is the value of:

$$8 \times 3 \div 6 + 7 - 4 \times 2 \div 4 + 8 - 10 = ?$$

- Ans  1. 6  
 2. 5  
 3. 7  
 4. 4

Question ID : 9895809676  
Chosen Option : 3

Q.7 The HCF and LCM of 2 numbers are 2 and 60 respectively. If one of the numbers is 14 more than the other, then the smaller number is:

- Ans  1. 7  
 2. 5  
 3. 6  
 4. 4

Question ID : 9895809680  
Chosen Option : 2

Q.7 Two stations P and Q are 570 km apart on a straight line. One train starts from P at 5 a.m. and travels towards Q at 90 km/h. Another train starts from Q at 6 a.m. and travels towards P at a speed of 70 km/h. At what time will they meet?

- Ans
- 1. 11 a.m.
  - 2. 9 a.m.
  - 3. 1 p.m.
  - 4. 3 p.m.

Question ID : 9895809694  
Chosen Option : 2

Section : English Language

Q.1 Select the meaning of the given idiom.

Hit a bad patch

- Ans
- 1. Came across stormy weather
  - 2. Had a bumpy car ride
  - 3. Went through many illnesses
  - 4. Experienced difficulty

Question ID : 9895809871  
Chosen Option : 2

Q.2 Select the most appropriate word to fill in the blank.

These medicines are \_\_\_\_\_ for curing cold.

- Ans
- 1. natural
  - 2. effective
  - 3. powerful
  - 4. proper

Question ID : 9895809876  
Chosen Option : 4

Q.3 Identify the segment in the sentence which contains the grammatical error from the given options.

Ships are made of iron and a parts of them remains under water.

- Ans
- 1. under water
  - 2. Ships are
  - 3. made of iron
  - 4. a parts of

Question ID : 9895809853  
Chosen Option : 3

Q.4 Select the antonym of the given word.

DISTANT

- Ans
- 1.

- 2. Close
- 3. Remote
- 4. Far

Question ID : 9895809868  
Chosen Option : 2

Q.5 Select the meaning of the given idiom.

Man of straw

- Ans
- 1. Weak
  - 2. Selfish
  - 3. Useless
  - 4. Stubborn

Question ID : 9895809870  
Chosen Option : 1

Q.6 Select the wrongly spelt word.

- Ans
- 1. Inevitable
  - 2. Intelligence
  - 3. Idiosyncracy
  - 4. Incredible

Question ID : 9895809874  
Chosen Option : 3

Q.7 Select the most appropriate option to substitute the underlined segment in the given sentence. If there is no need to substitute it, select No substitution required.

A well-known animal living in Antarctica are a penguins.

- Ans
- 1. is a penguin
  - 2. No substitution required
  - 3. is the penguin
  - 4. are penguin

Question ID : 9895809857  
Chosen Option : 4

Q.8 Select the most appropriate option to substitute the underlined segment in the given sentence. If there is no need to substitute it, select No substitution required.

The weather reports is prepared by the Meteorological Department of the Government.

- Ans
- 1. prepared
  - 2. is prepare
  - 3. are prepared
  - 4. No substitution required

Question ID : 9895809855  
Chosen Option : 3

Q.9 Select the most appropriate word to fill in the blank.

I will write a letter to you \_\_\_\_\_ the dates of the programme.

- Ans  1. urging  
 2. indicating  
 3. involving  
 4. propagating

Question ID : 9895809877  
Chosen Option : 2

**Comprehension:**

In the following passage some words have been deleted. Fill in the blanks with the help of the alternatives given. Select the most appropriate option for each number.

Orissa was hit by a cyclone with a wind speed of 200 km/h on 18 October 1999. The cyclone (1) \_\_\_\_\_ 45,000 houses making 7,00,000 people homeless. (2) \_\_\_\_\_ 29 October the same year, a second cyclone (3) \_\_\_\_\_ a wind speed of 260 km/h hit Orissa again. It was (4) \_\_\_\_\_ by water waves about 9 metre high. Thousands of people (5) \_\_\_\_\_ their lives. Property worth crores of rupees was destroyed.

**SubQuestion No : 10**

Q.1  
0 Select the most appropriate option that will fill in the blank number 1.

- Ans  1. smashed  
 2. burst  
 3. exploded  
 4. crashed

Question ID : 9895809861  
Chosen Option : 2

**Comprehension:**

In the following passage some words have been deleted. Fill in the blanks with the help of the alternatives given. Select the most appropriate option for each number.

Orissa was hit by a cyclone with a wind speed of 200 km/h on 18 October 1999. The cyclone (1) \_\_\_\_\_ 45,000 houses making 7,00,000 people homeless. (2) \_\_\_\_\_ 29 October the same year, a second cyclone (3) \_\_\_\_\_ a wind speed of 260 km/h hit Orissa again. It was (4) \_\_\_\_\_ by water waves about 9 metre high. Thousands of people (5) \_\_\_\_\_ their lives. Property worth crores of rupees was destroyed.

**SubQuestion No : 11**

Q.1  
1 Select the most appropriate option that will fill in the blank number 2.

Ans

- 1. In
- 2. From
- 3. By
- 4. On

Question ID : 9895809862  
Chosen Option : 1

**Comprehension:**

In the following passage some words have been deleted. Fill in the blanks with the help of the alternatives given. Select the most appropriate option for each number.

Orissa was hit by a cyclone with a wind speed of 200 km/h on 18 October 1999. The cyclone (1) \_\_\_\_\_ 45,000 houses making 7,00,000 people homeless. (2) \_\_\_\_\_ 29 October the same year, a second cyclone (3) \_\_\_\_\_ a wind speed of 260 km/h hit Orissa again. It was (4) \_\_\_\_\_ by water waves about 9 metre high. Thousands of people (5) \_\_\_\_\_ their lives. Property worth crores of rupees was destroyed.

**SubQuestion No : 12**

Q.1  
2 Select the most appropriate option that will fill in the blank number 3.

- Ans
- 1. in
  - 2. from
  - 3. of
  - 4. with

Question ID : 9895809863  
Chosen Option : 4

**Comprehension:**

In the following passage some words have been deleted. Fill in the blanks with the help of the alternatives given. Select the most appropriate option for each number.

Orissa was hit by a cyclone with a wind speed of 200 km/h on 18 October 1999. The cyclone (1) \_\_\_\_\_ 45,000 houses making 7,00,000 people homeless. (2) \_\_\_\_\_ 29 October the same year, a second cyclone (3) \_\_\_\_\_ a wind speed of 260 km/h hit Orissa again. It was (4) \_\_\_\_\_ by water waves about 9 metre high. Thousands of people (5) \_\_\_\_\_ their lives. Property worth crores of rupees was destroyed.

**SubQuestion No : 13**

Q.1  
3 Select the most appropriate option that will fill in the blank number 4.

- Ans
- 1. accompanied
  - 2. increased
  - 3. started
  - 4. furnished

**Comprehension:**

In the following passage some words have been deleted. Fill in the blanks with the help of the alternatives given. Select the most appropriate option for each number.

Orissa was hit by a cyclone with a wind speed of 200 km/h on 18 October 1999. The cyclone (1) \_\_\_\_\_ 45,000 houses making 7,00,000 people homeless. (2) \_\_\_\_\_ 29 October the same year, a second cyclone (3) \_\_\_\_\_ a wind speed of 260 km/h hit Orissa again. It was (4) \_\_\_\_\_ by water waves about 9 metre high. Thousands of people (5) \_\_\_\_\_ their lives. Property worth crores of rupees was destroyed.

SubQuestion No : 14

Q.1  
4 Select the most appropriate option that will fill in the blank number 5.

- Ans
- 1. gave
  - 2. left
  - 3. finished
  - 4. lost

Q.1  
5 Select the antonym of the given word.

**FLOOD**

- Ans
- 1. Overflow
  - 2. Drought
  - 3. Outpouring
  - 4. Abundance

Q.1  
6 Select the most appropriate option to substitute the underlined segment in the given sentence. If there is no need to substitute it, select No substitution required.

Animals adapt themselves for survive in the conditions in which they live.

- Ans
- 1. to survive in
  - 2. by surviving in
  - 3. No substitution required
  - 4. for survival on

Q.1  
7

Select the most appropriate word to fill in the blank.

Emperors need more resources \_\_\_\_\_ kings because empires are larger than kingdoms.

- Ans  1. than  
 2. of  
 3. as  
 4. for

Question ID : 9895809859  
Chosen Option : 1

Q.1 Identify the segment in the sentence which contains the grammatical error from the given options.

8

When food gets spoil, it produces a foul smell.

- Ans  1. When food  
 2. a foul smell  
 3. it produces  
 4. get spoil

Question ID : 9895809852  
Chosen Option : 4

Q.1 Identify the segment in the sentence which contains the grammatical error from the given options.

9

The Qutub Minar in Delhi, the world heritage site, is more than 1600 years old.

- Ans  1. the world heritage site  
 2. The Qutub Minar  
 3. is more than  
 4. 1600 years old

Question ID : 9895809854  
Chosen Option : 2

Q.2 Select the word which means the same as the group of words given.

0

A person who is blamed for something that someone else has done.

- Ans  1. Volunteer  
 2. Scapegoat  
 3. Athlete  
 4. Culprit

Question ID : 9895809872  
Chosen Option : 1

Q.2 Select the word which means the same as the group of words given.

1

A person who knows and is able to use several languages.

- Ans  1. Polygamist  
 2. Bilingual

3. Agnostic

4. Polyglot

Question ID : 9895809873  
Chosen Option : 1

Q.2  
2 Select the most appropriate word to fill in the blank.

The blue whale has the largest tongue which can weigh \_\_\_\_\_ an elephant.

Ans  1. many more as

2. as much as

3. much

4. more as

Question ID : 9895809858  
Chosen Option : 2

Q.2  
3 Select the wrongly spelt word.

Ans  1. Inevitable

2. Irresistible

3. Incredible

4. Incidentally

Question ID : 9895809875  
Chosen Option : 2

Q.2  
4 Select the synonym of the given word.

RELISH

Ans  1. Enjoy

2. Hate

3. Detest

4. Dislike

Question ID : 9895809867  
Chosen Option : 2

Q.2  
5 Select the synonym of the given word.

STUBBORN

Ans  1. Obstinate

2. Adaptable

3. Cooperative

4. Obedient

Question ID : 9895809866  
Chosen Option : 2



Q.1 'चोली दामन का साथ' मुहावरे का सही अर्थ है -

- Ans
1. घनिष्ठ संबंध होना
  2. दुश्मनी
  3. मेल न होना
  4. कटु शत्रुता

Question ID : 98958010003  
Chosen Option : --

Q.2 'बहुत-सी भाषाओं को जानने वाला' के लिए एक शब्द है-

- Ans
1. द्विभाषी
  2. प्रशासक
  3. बहुभाषाविद्
  4. अनुवादक

Question ID : 98958010004  
Chosen Option : --

Q.3 दिए गए वाक्य में रेखांकित खंड को प्रतिस्थापित करने के लिए उपयुक्त विकल्प का चयन करें।

अब 'क्षय' जैसी प्राणन्तक बीमारी का इलाज भी सम्भव है।

- Ans
1. उपचार
  2. आधान
  3. समाचार
  4. समादान

Question ID : 9895809987  
Chosen Option : --

Q.4 'सर्प' का पर्यावाची शब्द है-

- Ans
1. व्याल
  2. शार्दूल
  3. पतंग
  4. अहित

Question ID : 98958010000  
Chosen Option : --

Q.5 रिक्त स्थान को भरने के लिए उपयुक्त शब्द का चयन करें।

सामाजिक कुरीतियों का एकमात्र कारण \_\_\_\_\_ है।

- Ans
1. अनजान
  2. अहंकार
  3. अज्ञान

✗ 4. अकड़

Question ID : 9895809990  
Chosen Option : --

Q.6 रिक्त स्थान को भरने के लिए उपयुक्त शब्द का चयन करें।

मेरा ध्यान \_\_\_\_\_ भाई की ओर था।

- Ans
1. तुम
  2. हमारे
  3. हमें
  4. अपने

Question ID : 9895809991  
Chosen Option : --

Q.7 सही वर्तनी वाले शब्द का चयन करें।

- Ans
1. सन्मुख
  2. सनमुख
  3. संमूख
  4. सम्मुख

Question ID : 98958010007  
Chosen Option : --

Q.8 दिए गए वाक्य में रेखांकित खंड को प्रतिस्थापित करने के लिए उपयुक्त विकल्प का चयन करें।

आपके विद्वतापूर्ण व्याख्यान से मेरी शंका का निराकरण हो गया।

- Ans ✗
1. समाधान
  2. संहार
  3. स्पष्टीकरण
  4. विवेचन

Question ID : 9895809986  
Chosen Option : --

Q.9 रिक्त स्थान को भरने के लिए उपयुक्त शब्द का चयन करें।

वह \_\_\_\_\_ समझदार है।

- Ans
1. अधिक
  2. तीव्र
  3. बहुत
  4. मंद

Question ID : 9895809988  
Chosen Option : --

Q.1  
0 दिए गए वाक्य का वह भाग ज्ञात करें जिसमें कोई त्रुटि है।

हम में से अधिकतर व्यक्ति अनेक आदतों से बँधा हुए हैं।

Ans

1. हम में से
2. बँधा हुए हैं।
3. अनेक आदतों से
4. अधिकतर व्यक्ति

Question ID : 9895809983  
Chosen Option : --

Q.1  
1 'पत्थर' का पर्यावाची शब्द है-

Ans

1. शैल
2. अचल
3. भूधर
4. प्रस्तर

Question ID : 98958010001  
Chosen Option : --

Q.1  
2 'इष्ट' शब्द का विलोम शब्द है-

Ans

1. अवनति
2. बुरा
3. अनिष्ट
4. पतन

Question ID : 9895809998  
Chosen Option : --

Q.1  
3 सही वर्तनी वाले शब्द का चयन करें।

Ans

1. परिवार
2. परीवार
3. प्ररिवार
4. परिवार

Question ID : 98958010006  
Chosen Option : --

Q.1  
4 दिए गए वाक्य का वह भाग ज्ञात करें जिसमें कोई त्रुटि है।

बादशाह अकबर एक दिन शिकार खेलती हुई जंगल में भटक गए।

Ans

1. शिकार खेलती हुई

2. जंगल में भटक गए।  
 3. बादशाह अकबर  
4. एक दिन

Question ID : 9895809982  
Chosen Option : --

Q.1  
5 'पराधीन' शब्द का विलोम शब्द है-

- Ans
1. अर्वाचीन
  2. स्वाधीन
  3. अधीन
  4. प्राचीन

Question ID : 9895809999  
Chosen Option : --

Q.1  
6 दिए गए वाक्य का वह भाग ज्ञात करें जिसमें कोई त्रुटि है।

वर्तमान युग कम्प्यूटर तथा सूचना प्रौद्योगिकी की युग है।

- Ans
1. कम्प्यूटर तथा
  2. की युग है।
  3. सूचना प्रौद्योगिकी
  4. वर्तमान युग

Question ID : 9895809984  
Chosen Option : --

Q.1  
7 'जो भेदा या तोड़ा न जा सके' के लिए एक शब्द है-

- Ans
1. अभेद्य
  2. पारदर्शी
  3. अभेद
  4. नश्वर

Question ID : 98958010005  
Chosen Option : --

Q.1  
8 'अन्धे के हाथ बटेर लगना' मुहावरे का सही अर्थ है -

- Ans
1. हानि होना
  2. एकाएक लाभ होना
  3. अन्धे को सोना मिल जाना
  4. भविष्य की बात को जान लेना

Question ID : 98958010002

## Comprehension:

निम्नलिखित गद्यांश के रिक्त स्थानों की पूर्ति गद्यांश के नीचे दिए गए प्रश्नों के अनुसार कीजिए-

विज्ञान के क्षेत्र में जाकर लोग धर्म की \_\_\_\_\_ (1) करने लगते हैं। धर्म पर \_\_\_\_\_ (2) का लांछन लगाकर वैज्ञानिक अपने सत्यान्वेषी होने का गुणगान करते हैं। सच्चाई यह है कि धर्म और विज्ञान अलग-अलग होकर भी अलग-अलग नहीं हैं। दोनों का उद्देश्य \_\_\_\_\_ (3) का हित है। धर्म का \_\_\_\_\_ (4) मनुष्य के भीतर परोपकार, त्याग-बलिदान, करुणा और प्रेम का \_\_\_\_\_ (5) करके उसे सुंदर सामाजिक जीवन जीने योग्य बनाना है।

SubQuestion No : 19

Q.1  
9 गद्यांश में संकेतित रिक्त स्थान (1) के लिए उपयुक्त शब्द होगा।

Ans

1. उपेक्षा
2. उत्प्रेक्षा
3. उलाहना
4. अपेक्षा

Question ID : 9895809993

Chosen Option : --

## Comprehension:

निम्नलिखित गद्यांश के रिक्त स्थानों की पूर्ति गद्यांश के नीचे दिए गए प्रश्नों के अनुसार कीजिए-

विज्ञान के क्षेत्र में जाकर लोग धर्म की \_\_\_\_\_ (1) करने लगते हैं। धर्म पर \_\_\_\_\_ (2) का लांछन लगाकर वैज्ञानिक अपने सत्यान्वेषी होने का गुणगान करते हैं। सच्चाई यह है कि धर्म और विज्ञान अलग-अलग होकर भी अलग-अलग नहीं हैं। दोनों का उद्देश्य \_\_\_\_\_ (3) का हित है। धर्म का \_\_\_\_\_ (4) मनुष्य के भीतर परोपकार, त्याग-बलिदान, करुणा और प्रेम का \_\_\_\_\_ (5) करके उसे सुंदर सामाजिक जीवन जीने योग्य बनाना है।

SubQuestion No : 20

Q.2  
0 गद्यांश में संकेतित रिक्त स्थान (2) के लिए उपयुक्त शब्द होगा।

Ans

1. अंधविश्वास
2. कर्मठता
3. मर्यादा
4. विश्वास

Comprehension:

निम्नलिखित गद्यांश के रिक्त स्थानों की पूर्ति गद्यांश के नीचे दिए गए प्रश्नों के अनुसार कीजिए-

विज्ञान के क्षेत्र में जाकर लोग धर्म की \_\_\_\_\_ (1) करने लगते हैं। धर्म पर \_\_\_\_\_ (2) का लांछन लगाकर वैज्ञानिक अपने सत्यान्वेषी होने का गुणगान करते हैं। सच्चाई यह है कि धर्म और विज्ञान अलग-अलग होकर भी अलग-अलग नहीं हैं। दोनों का उद्देश्य \_\_\_\_\_ (3) का हित है। धर्म का \_\_\_\_\_ (4) मनुष्य के भीतर परोपकार, त्याग-बलिदान, करुणा और प्रेम का \_\_\_\_\_ (5) करके उसे सुंदर सामाजिक जीवन जीने योग्य बनाना है।

SubQuestion No : 21

Q.2  
1 गद्यांश में संकेतित रिक्त स्थान (3) के लिए उपयुक्त शब्द होगा।

- Ans
- 1. इतिहास
  - 2. सामाजिक विज्ञान
  - 3. मनुष्य
  - 4. विज्ञान

Comprehension:

निम्नलिखित गद्यांश के रिक्त स्थानों की पूर्ति गद्यांश के नीचे दिए गए प्रश्नों के अनुसार कीजिए-

विज्ञान के क्षेत्र में जाकर लोग धर्म की \_\_\_\_\_ (1) करने लगते हैं। धर्म पर \_\_\_\_\_ (2) का लांछन लगाकर वैज्ञानिक अपने सत्यान्वेषी होने का गुणगान करते हैं। सच्चाई यह है कि धर्म और विज्ञान अलग-अलग होकर भी अलग-अलग नहीं हैं। दोनों का उद्देश्य \_\_\_\_\_ (3) का हित है। धर्म का \_\_\_\_\_ (4) मनुष्य के भीतर परोपकार, त्याग-बलिदान, करुणा और प्रेम का \_\_\_\_\_ (5) करके उसे सुंदर सामाजिक जीवन जीने योग्य बनाना है।

SubQuestion No : 22

Q.2  
2 गद्यांश में संकेतित रिक्त स्थान (4) के लिए उपयुक्त शब्द होगा।

- Ans
- 1. लक्ष्य
  - 2. साक्ष्य
  - 3. लक्ष
  - 4. साधन

Comprehension:

निम्नलिखित गद्यांश के रिक्त स्थानों की पूर्ति गद्यांश के नीचे दिए गए प्रश्नों के अनुसार कीजिए-

विज्ञान के क्षेत्र में जाकर लोग धर्म की \_\_\_\_\_ (1) करने लगते हैं। धर्म पर \_\_\_\_\_ (2) का लक्षण लगाकर वैज्ञानिक अपने सत्यान्वेषी होने का गुणगान करते हैं। सच्चाई यह है कि धर्म और विज्ञान अलग-अलग होकर भी अलग-अलग नहीं हैं। दोनों का उद्देश्य \_\_\_\_\_ (3) का हित है। धर्म का \_\_\_\_\_ (4) मनुष्य के भीतर परोपकार, त्याग-बलिदान, करुणा और प्रेम का \_\_\_\_\_ (5) करके उसे सुंदर सामाजिक जीवन जीने योग्य बनाना है।

SubQuestion No : 23

Q.2  
3 गद्यांश में संकेतित रिक्त स्थान (5) के लिए उपयुक्त शब्द होगा।

- Ans
1. प्रगति
  2. विनाश
  3. हास
  4. विकास

Q.2  
4 दिए गए वाक्य में रेखांकित खंड को प्रतिस्थापित करने के लिए उपयुक्त विकल्प का चयन करें।

सुरेश और मोहन दोनों साथ-साथ पढ़ने वाले छात्र हैं।

- Ans
1. सहकर्मी
  2. परोपकारी
  3. स्वावलंबी
  4. सहपाठी

Q.2  
5 रिक्त स्थान को भरने के लिए उपयुक्त शब्द का चयन करें।

हमारे समाज \_\_\_\_\_ अनेक कुरीतियाँ हैं।

- Ans
1. अंदर
  2. में
  3. भीतर
  4. बीच

Question ID : 9895809989  
Chosen Option : --



# Constable (GD) in CAPFs, NIA, SSF and Rifleman (GD) in Assam Rifles Examination, 2018

Roll No. :	
Registration No.	
Name :	
Exam Venue :	iON Digital Zone iDZ Kannur
Exam Time :	12:30 PM - 2:00 PM
Exam Date :	11/03/2019

Section : General Section

Q.1 In a certain code, EMTWX is coded as XWTME, then how is PYSCI coded in the same way?

- Ans  1. CIPSY  
 2. CYSIP  
 3. CISPY  
 4. ICSYP

Question ID : 9895809354  
Chosen Option : 4

Q.2

Four letter clusters have been given, out of which three are alike in some manner, while one is different. Choose the odd

- Ans <sup>or</sup>  1. GAT  
 2. DAT  
 3. EAV  
 4. WAD

Question ID : 9895809349  
Chosen Option : 3

Q.3

Priti scored more than Rahul. Yamuna scored as much as Divya. Lokita scored less than Manju. Rahul scored more than Yamuna. Manju scored less than Divya. Who scored the lowest?

- Ans  1. Lokita  
 2. Rahul  
3. Manju  
 4. Yamuna

Question ID : 9895809358  
Chosen Option : 1

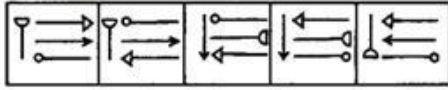
Q.4

Select the related word pair from the given alternatives.

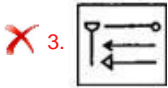
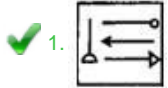
- Holi : Colours :: \_\_\_\_\_ : \_\_\_\_\_
- Ans  1. Diwali : Light  
 2. Muharram : Muslim  
 3. Hemis : Folk  
 4. Lodhi : Punjabi

Q.5 Choose the option which completes the given figure series.

PROBLEM FIGURES



Ans



Q.6 In a hall there are seven children (including girls and boys) P, Q, R, S, T, U and V. They sit on three benches I, II and III. Such that at least two children on each bench and at least one girl on each bench. R who is a girl child, does not sit with P, T and S. U the boy child sit with only Q. P sits on the bench I with his best friends. V sits on the bench III. T is the brother of R.

Who sits with R?

Ans

1. S

2. U

3. Q

4. V

Q.7 Find the missing term.

119, 109, 89, 59, \_\_\_\_\_

Ans

✓ 1. 19

✗ 2. 39

✗ 3. 49


✗ 4. 29

Q.8 Choose the option that most closely resembles the mirror image of the given figure when mirror is placed at right side.

Question figure:



Ans

1. 

2. 

3. 

4. 

Question ID : 9895809370  
Chosen Option : 2

Q.9 Six persons A, B, C, D, E and F are sitting in two rows, three in each.

E is not at the end of any row.

D is second to the left of F.

C, the neighbour of E is sitting diagonally opposite to D.

B is the neighbour of F.

Who is facing B?

Ans

1. A

2. E

3. D

4. C

Question ID : 9895809357  
Chosen Option : 1

Q.1 Four options have been given out of which three are alike in some manner, while one is different. Choose the odd one.  
0

Ans  1. 135

2. 54

3. 72

4. 83

Question ID : 9895809364  
Chosen Option : 1

Q.1 The statements below are followed by two conclusions labeled I and II. Assuming that the information in the statements  
1 is true, even if it appears to be at variance with generally established facts, decide which conclusion(s) logically and definitely follow(s) from the information given in the statements.

**Statements:**

All flowers are fruits.

All fruits are Plants.

**Conclusions:**

I. All Plants are flowers.

II. Some fruits are flowers.

Ans  1. Both Conclusions I and II follow.

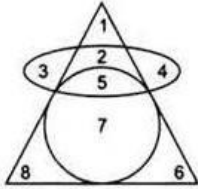
2. Only Conclusion I follows.

✓ 3. Only Conclusion II follows.

✗ 4. Either Conclusion I or II follows.

Question ID : 9895809360  
Chosen Option : 4

Q.1  
2 Which number is common to all the geometrical figures in the diagram below?



Ans ✗ 1. 7

✗ 2. 4

✗ 3. 2

✓ 4. 5

Question ID : 9895809372  
Chosen Option : 4

Q.1  
3 Find the missing number from the below options.

12	16	18
24	32	?
36	48	54

Ans ✗ 1. 28

✓ 2. 36

✗ 3. 48

✗ 4. 64

Question ID : 9895809365  
Chosen Option : 2

Q.1  
4 A figure marked on transparent sheet is given and followed by four answer figures, one out of these four options resembles the figure, which is obtained by folding transparent sheet along the dotted line.

This option is your answer.

Question figure:



Ans ✗ 1.

✓ 2.

✗ 3.

✗ 4.

Question ID : 9895809371

Q.1 <sub>5</sub> In the following question, select the related number from the given alternatives.

$$47 : 15 :: ? : 19$$

- Ans
- 1. 57
  - 2. 36
  - 3. 40
  - 4. 59

Question ID : 9895809363  
Chosen Option : 1

Q.1 <sub>6</sub> Select the correct option that will fill in the blank and complete the series.

AEI, EIO, IOU, \_\_\_\_\_

- Ans
- 1. OAU
  - 2. OUA
  - 3. IOA
  - 4. MIL

Question ID : 9895809348  
Chosen Option : 2

Q.1 <sub>7</sub> Select the option that is related to the third term in the same way as the second term is related to the first term.

AE : IM :: HL : ?

- Ans
- 1. PT
  - 2. TP
  - 3. DS
  - 4. FU

Question ID : 9895809353  
Chosen Option : 1

Q.1 <sub>8</sub> If '+' means '-', '-' means '×', '×' means '÷' and '÷' means '+', then:

$$43 - 2 \times 2 + 8 = ?$$

- Ans
- 1. 42
  - 2. 35
  - 3. 25
  - 4. 40

Question ID : 9895809366  
Chosen Option : 2

Q.1 <sub>9</sub> Four words have been given, out of which three are alike in some manner, while one is different. Choose the odd one.

- Ans
- 1. Chennai
  - 2. Mumbai
  - 3. Dispur

✓ 4. Jharkhand

Question ID : 9895809350  
Chosen Option : 4

Q.2  
0 In a certain code, GYM is coded as 2275, then how is KIT coded in the same way?

- Ans ✓ 1. 1980  
✗ 2. 1950  
✗ 3. 1970  
✗ 4. 1960

Question ID : 9895809355  
Chosen Option : 1

Q.2  
1 Select the correct option that will fill in the blank and complete the series.

43, 55, 79, 115, \_\_\_\_\_

- Ans ✓ 1. 163  
✗ 2. 127  
✗ 3. 172  
✗ 4. 139

Question ID : 9895809361  
Chosen Option : 1

Q.2  
2 Select the related word pair from the given alternatives.

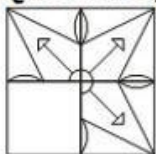
Andhra Pradesh : Telugu :: \_\_\_\_\_ : \_\_\_\_\_

- Ans ✗ 1. Goa : Hindi  
✗ 2. Assam : Maithili  
3. Tripura : Telugu  
4. Kerala : Malayalam

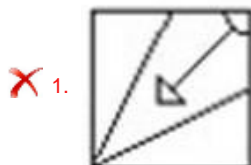
Question ID : 9895809352  
Chosen Option : 4

Q.2  
3 Which of the following answer figure will complete the given figure?

Question figure:



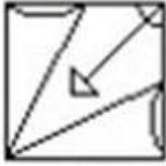
Ans



2.



3.



4.



Question ID : 9895809368  
Chosen Option : 4

**Q.2** The statements below are followed by two conclusions labeled I and II. Assuming that the information in the statements is true, even if it appears to be at variance with generally established facts, decide which conclusion(s) logically and definitely follow(s) from the information given in the statements.

**Statements:**

Some potatoes are tomatos.  
All tomatos are onions.

**Conclusions:**

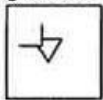
I. Some tomatos are potato.  
II. All onions are potato.

- Ans  1. Either Conclusion I or II follows.  
 2. Only Conclusion I follows.  
 3. Only Conclusion II follows.  
 4. Both Conclusions I and II follow.

Question ID : 9895809359  
Chosen Option : 1

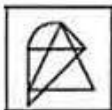
**Q.2**  
5 Choose the option figure in which the problem figure is hidden/embedded.

**Question Figure:**

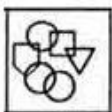


Ans

1.



2.



3.



✗ 4.



Question ID : 9895809369  
Chosen Option : 2

Q.2  
6 A satyagrahi could win the battle with non-violence by:

- Ans
1. Appealing to the common people of the oppressors
  2. Appealing to the charity of the oppressors
  3. Appealing to the conscience of the oppressors
  4. Appealing to the leaders of the oppressors

Question ID : 9895809546  
Chosen Option : 4

Q.2  
7 The \_\_\_\_\_ system of Government divides the legislature into two separate assemblies, chambers or houses.

- Ans
- ✗ 1. Unicameral
  - ✓ 2. Bicameral
  3. Quadracameral
  - ✗ 4. Tricameral

Question ID : 9895809536  
Chosen Option : 2

Q.2  
8 Jiziya Tax, during the Mughal Empire was a tax levied on:

- Ans
- ✗ 1. Muslim citizens
  - ✗ 2. All the citizens
  - ✗ 3. Noble citizens
  - ✓ 4. Non-Muslim citizens

Question ID : 9895809533  
Chosen Option : 1

Q.2  
9 In the 2018 Australian Open, \_\_\_\_\_ was the winner in the Women's singles event.

- Ans
- ✓ 1. Caroline Wozniacki
  2. Martina Hingis
  - ✗ 3. Serena Williams
  - ✗ 4. Venus Williams

Question ID : 9895809527  
Chosen Option : 2

Q.3  
0 The 2017 Sahitya Academy award for Gujarati was won by:

- Ans
1. Ramesh Megh
  - ✗ 2. Himanshu Patel
  - ✓ 3. Urmi Desai



 4. David Shah



Question ID : 9895809528  
Chosen Option : 1

Q.3  
1 All the things we use or consume, except \_\_\_\_\_ are obtained from resources on this earth.

- Ans
1. energy from water
  2. energy from wind
  3. energy from friction
  4. energy from the sun



Question ID : 9895809544  
Chosen Option : 3

Q.3  
2 During the first world war (1914-1918):

- Ans
-  1. Prices went down
  2. Prices increased by less than 10%
  3. Prices remained unchanged
  -  4. Prices almost doubled

Question ID : 9895809545  
Chosen Option : 3

Q.3  
3 Bitter tasting food is \_\_\_\_\_ in nature.

- Ans
-  1. Alkaline
  -  2. Acidic
  -  3. Neutral
  -  4. Bases

Question ID : 9895809539  
Chosen Option : 4

Q.3  
4 Democracy is considered to be better than dictatorship as it:

- Ans
1. Allows special provisions for mistakes
  2. Enhances the dignity of people
  3. Reduces equality among citizens
  4. Encourages conflicts among people

Question ID : 9895809534  
Chosen Option : 4

Q.3  
5 The first Indian Prime Minister to have been assassinated is:

- Ans
-  1. Indira Gandhi
  2. Morarji Desai
  -  3. Lal Bahadur Shastri
  -  4. Jawaharlal Nehru

Question ID : 9895809530  
Chosen Option : 4

Q.3  
6 Which of the following destroys ozone?

- Ans
1. Sulphur
  2. Carbon
  3. Chlorine
  4. Silicon

Question ID : 9895809538  
Chosen Option : 2

Q.3  
7 Consumers have a right to seek \_\_\_\_\_ against unfair trade practices and exploitation.

- Ans
1. Penalty
  2. Sympathy
  3. Injury
  4. Redressal

Question ID : 9895809532  
Chosen Option : 1

Q.3  
8 Sugam Tax is related to:

- Ans
1. Income Tax
  2. Custom Duty
  3. Excise Duty
  4. Commercial Tax

Question ID : 9895809531  
Chosen Option : 4

Q.3  
9 Substances said to be biodegradable:

- Ans
1. Can be broken down by physical process
  2. Can be broken down by chemical process
  3. Can be broken down by biological processes
  4. Cannot be broken down at all

Question ID : 9895809543  
Chosen Option : 2

Q.4  
0 The Kulik bird sanctuary is located in:

- Ans
1. West Bengal
  2. Uttar Pradesh
  3. Kerala
  4. Madhya Pradesh

Question ID : 9895809525  
Chosen Option : 1

Q.4  
1 In the 2016 Olympics, \_\_\_\_\_ won the gold in women's 100-metres sprint.

- Ans
1. Elaine Thompson
  2. Shelly-Ann Fraser-Pryce
  3. Gail Devers
  4. Wyomia Tyus

Question ID : 9895809526  
Chosen Option : 3

Q.4  
2 The 'Ranappa' dance is from the state of:

- Ans
1. Odisha
  2. Tamil Nadu
  3. Kerala
  4. Punjab

Question ID : 9895809523  
Chosen Option : 2

Q.4  
3 Dumhal is a form of dance from the state of:

- Ans
1. Gujarat
  2. Kerala
  3. West Bengal
  4. Jammu and Kashmir

Question ID : 9895809524  
Chosen Option : 3

Q.4  
4 The first Bharat Ratna award of independent India was given to:

- Ans
1. C.N.R Rao
  2. Jawaharlal Nehru
  3. C.V Raman
  4. Sardar Patel

Question ID : 9895809529  
Chosen Option : 4

Q.4  
5 Green algae are green because of:

- Ans
1. phycoerythrin
  2. chlorophyll
  3. xanthophylls
  4. phycobilin

Question ID : 9895809537  
Chosen Option : 1

Q.4  
6 Who amongst the following is the Minister for Rural Development in India as on Feb 2019?

- Ans
1. Narendra Singh Tomar
  2. Anant Geete
  3. Dharmendra Pradhan
  4. Santosh Kumar Gangwar

Question ID : 9895809535  
Chosen Option : 1

Q.4  
7 The Southernmost port in India is located in the state of:

- Ans
1. Andhra Pradesh
  2. Tamil Nadu
  3. Kerala
  4. Telangana

Question ID : 9895809542  
Chosen Option : 3

Q.4  
8 The human sex chromosomes determine the gender of the child, with XX being:

- Ans
1. Transgender
  2. Female
  3. Could be either female or male
  4. Male

Question ID : 9895809540  
Chosen Option : 4

Q.4  
9 Harappa and \_\_\_\_\_ were the two ancient, excavated cities that were part of the Indus Valley Civilization.

- Ans
1. Varanasi
  2. Hastinapura
  3. Surat
  4. Mohenjo-Daro

Question ID : 9895809547  
Chosen Option : 3

Q.5  
0 An instrument called \_\_\_\_\_ measures 'electric potential difference' in a circuit.

- Ans
1. Gyroscope
  2. Ohmmeter
  3. Voltmeter
  4. Thermometer

Question ID : 9895809541  
Chosen Option : 3

Q.5  
1 A solid metallic sphere of radius 4 cm is melted and recast into '4' identical cubes. What is the side of the cube?

- Ans
1.  $7^3 \sqrt{\frac{\pi}{3}} \text{ cm}$

2.  $5^3 \sqrt{\frac{\pi}{3}} \text{ cm}$

3.  $6^3 \sqrt{\frac{\pi}{3}} \text{ cm}$

4.  $4^3 \sqrt{\frac{\pi}{3}} \text{ cm}$

Question ID : 9895809713

Chosen Option : 4

Q.5 The bar graph shows the number of cycles sold by a distributor in each month from January to June. What is the increase in the number of cycles sold in April as compared to March?



Ans  1. 75%

2. 78%

3. 68%

4. 70%

Question ID : 9895809721

Chosen Option : 2

Q.5 The ratio between the perimeter and the breadth of a rectangle is 3 : 1. If the area of the rectangle is 310 sq. cm, the length of the rectangle is nearly:

Ans  1. 11.45 cm

2. 10.45 cm

3. 12.45 cm

4. 13.45 cm

Question ID : 9895809714

Chosen Option : 3

Q.5 The volume of a solid sphere is  $4851 \text{ m}^3$ . What is the surface area of the sphere? (Take  $\pi = \frac{22}{7}$ )

Ans  1.  $1386 \text{ m}^2$

2.  $1364 \text{ m}^2$

3.  $1260 \text{ m}^2$

4.  $1408 \text{ m}^2$

Question ID : 9895809715

Chosen Option : 1

Q.5 Find the value of:

$$(7 \times 6 + 5 - 15) \div 4 + 6 \div 3 - 4 + 18 \div 3$$

Ans  1. 12

2. 14

3. 16

4. 18

Question ID : 9895809701  
Chosen Option : 1

Q.5  
6 What is the reciprocal ratio of 4 : 5 : 8 ?

- Ans
- 1. 8 : 5 : 4
  - 2. 5 : 4 : 3
  - 3. 3 : 4 : 5
  - 4. 10 : 8 : 5

Question ID : 9895809711  
Chosen Option : 1

Q.5  
7 The list price of an article is ₹ 80. A customer pays ₹ 30 for it. He was given 2 successive discounts, one of them being 50%. What was the other discount?

- Ans
- 1. 20%
  - 2. 12.50%
  - 3. 30%
  - 4. 25%

Question ID : 9895809703  
Chosen Option : 2

Q.5  
8 X, Y and Z can complete a piece of work in 8, 20 and 25 days respectively. Working together, they will complete the same work in:

- Ans
- 1.  $\frac{180}{43}$  days
  - 2.  $\frac{162}{43}$  days
  - 3.  $\frac{200}{43}$  days
  - 4.  $\frac{172}{43}$  days

Question ID : 9895809717  
Chosen Option : 1

Q.5  
9 A grocer has a sale of ₹ 3,425, ₹ 3,810, ₹ 3,155 and ₹ 3,610 in 4 consecutive days. How much sale should he have in the 5th day so as to get an average sale of ₹ 3,500?

- Ans
- 1. ₹ 3,500
  - 2. ₹ 3,435
  - 3. ₹ 3,480
  - 4. ₹ 3,455

Question ID : 9895809698  
Chosen Option : 3

Q.6  
0 A car owner buys petrol at ₹ 40, ₹ 50 and ₹ 60 per litre for 3 consecutive years. If he spends ₹ 30,000 each year, what is the average cost of a litre of petrol? (correct to two decimal places)

- Ans
- 1. ₹ 48.65
  - 2. ₹ 51.20
  - 3. ₹ 49.20
  - 4. ₹ 50

Question ID : 9895809699  
Chosen Option : 4

**Q.6** P works twice as fast as Q. If Q can complete a task in 36 days independently, the number of days in which P and Q can together complete the task in:

- Ans**
1. 12 days
  2. 9 days
  3. 16 days
  4. 18 days

Question ID : 9895809716  
Chosen Option : 1

**Q.6** A train passes a platform in 42 seconds and a man standing on the platform in 25 seconds. If the speed of the train is 72 km/hr, what is the length of the platform?

- Ans**
1. 300 m
  2. 270 m
  3. 340 m
  4. 370 m

Question ID : 9895809718  
Chosen Option : 1

**Q.6**  
3 What is the greatest 3-digit number divisible by 4, 5 and 6?

- Ans**
1. 990
  2. 930
  3. 960
  4. 900

Question ID : 9895809705  
Chosen Option : 3

**Q.6**  
4 If a equals 20% of c and b equals 40% of c, then which one of the following is 150% of b?

- Ans**
1. 50% of c
  2. 250% of a
  3. 65% of c
  4. 300% of a

Question ID : 9895809706  
Chosen Option : 4

**Q.6**  
5 Two numbers A and B are respectively 80% and 50% more than the third number C. What is the ratio of A and B?

- Ans**
1. 6 : 5
  2. 5 : 6
  3. 8 : 5
  4. 5 : 8

Question ID : 9895809710  
Chosen Option : 3

6 A cloth piece was purchased for ₹ 700. At what price should it be sold to get a profit of 12.5% after a tailoring charge of ₹ 20 was paid for?

- Ans
- 1. ₹ 760
  - 2. ₹ 810
  - 3. ₹ 785
  - 4. ₹ 840

Question ID : 9895809707  
Chosen Option : 1

Q.6 The length of the bridge, which a train 400 metres long and travelling at 60 km/hr can cross in 36 seconds, is:  
7

- Ans
- 1. 450 m
  - 2. 250 m
  - 3. 200 m
  - 4. 500 m

Question ID : 9895809719  
Chosen Option : 1

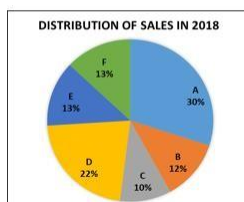
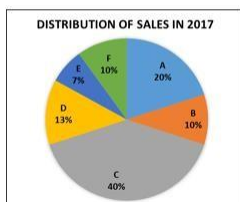
Q.6 Find the value of:  
8

$$(11 + 4) - 9 \times 1 \div 3 \text{ of } 4$$

- Ans
- 1.  $\frac{75}{4}$
  - 2.  $\frac{57}{4}$
  - 3. 5
  - 4. 3

Question ID : 9895809700  
Chosen Option : 3

Q.6 The pie charts show the market share of the companies in the detergent market in 2017 and 2018. The total size of the market has decreased from ₹ 300 crores to ₹ 200 crores. What is the decrease in the sales of Company F?  
9



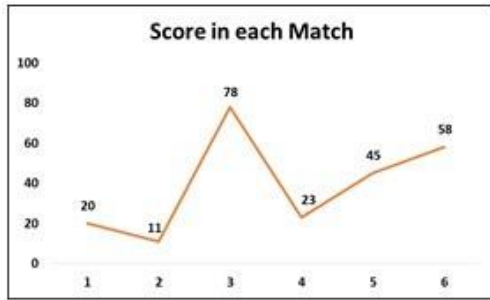
- Ans
- 1.  $14\frac{1}{3}\%$
  - 2.  $12\frac{1}{3}\%$
  - 3.  $33\frac{1}{3}\%$
  - 4.  $13\frac{1}{3}\%$

Question ID : 9895809722  
Chosen Option : 4

Q.7  
0



The line graph shows the scores of a batsman in 6 consecutive matches. What is his batting average in the 6 matches?



- Ans
- 1. 37.19
  - 2. 38.33
  - 3. 38.17
  - 4. 39.17

Question ID : 9895809720  
Chosen Option : 2

Q.7 If the selling price is tripled, the profit becomes 5 times. What is the profit percent?

- Ans
- 1. 100%
  - 2. 200%
  - 3. 50%
  - 4. 150%

Question ID : 9895809708  
Chosen Option : 3

Q.7 A sum fetched a total simple interest of ₹ 1,350 at 9% p.a. in 5 years. What is the sum?

- Ans
- 1. ₹ 2,000
  - 2. ₹ 3,300
  - 3. ₹ 2,500
  - 4. ₹ 3,000

Question ID : 9895809712  
Chosen Option : 2

Q.7 What is the value of  $x$  if the mean of 21, 26, 49 and  $x$  is 32?

- Ans
- 1. 30
  - 2. 36
  - 3. 32
  - 4. 34

Question ID : 9895809704  
Chosen Option : 3

Q.7 If 15 apples cost as much as 6 strawberries, 2 strawberries cost as much as 16 bananas, 6 bananas cost as much as 15 potatoes, then what is the cost of 1 potato if an apple costs ₹ 20?

- Ans
- 1. ₹ 25
  - 2. ₹ 22.50

✓ 3. ₹ 2.50

✗ 4. ₹ 2.25

Question ID : 9895809709  
Chosen Option : 3

Q.7 A sum of ₹ 1,000 becomes ₹ 1,144.90 in 2 years. At what rate is the interest is compounded annually?  
5

Ans ✓ 1. 7%

✗ 2. 5%

✗ 3. 8%

✗ 4. 6%

Question ID : 9895809702  
Chosen Option : 1

Section : English Language

Q.1 Select the synonym of the given word.

COMPASSION

Ans ✗ 1. Indifference

✗ 2. Heartlessness

3. Cruelty

✓ 4. Pity

Question ID : 9895809893  
Chosen Option : 3

Q.2 Select the wrongly spelt word.

Ans ✗ 1. Believe

✗ 2. Conscience

✓ 3. Irresistable

✗ 4. Apparent

Question ID : 9895809901  
Chosen Option : 1

Q.3 Identify the segment in the sentence which contains the grammatical error from the given options.

Thunderstorms develop in hot, humid tropical areas like India much to frequently.

Ans 1. tropical areas

2. frequently

3. Thunderstorms develop

4. much to

Question ID : 9895809878  
Chosen Option : 1

Q.4

Select the word which means the same as the group of words given.

Intentionally starting a fire to damage something

- Ans
1. Extinguish
  2. Arson
  3. Crime
  4. Loot

Question ID : 9895809898  
Chosen Option : 1

Q.5 Identify the segment in the sentence which contains the grammatical error from the given options.

The earthy fragrance of soil after a first rain is always refreshing.

- Ans
1. always refreshing
  2. The earthy
  3. a first rain
  4. fragrance of

Question ID : 9895809880  
Chosen Option : 2

Q.6 Select the most appropriate word to fill in the blank.

India gets a large number of medical tourists and visitors \_\_\_\_\_ many countries.

- Ans
1. through
  2. by
  3. from
  4. across

Question ID : 9895809885  
Chosen Option : 3

Q.7 Select the most appropriate option to substitute the underlined segment in the given sentence. If there is no need to substitute it, select No substitution required.

In vigorous exercise, the demand for bodily energy is very high.

- Ans
1. In vigorously exercise
  2. No substitution required
  3. While vigorous exercise
  4. During vigorous exercise

Question ID : 9895809883  
Chosen Option : 1

Q.8 Select the most appropriate word to fill in the blank.

Unlike the calm waters of lakes, ocean water keeps moving \_\_\_\_\_.

- Ans
1. continuous
  2. continuously

- 3. continue
- 4. continuing

Question ID : 9895809884  
Chosen Option : 1

Q.9 Select the wrongly spelt word.

- Ans
- 1. leisure
  - 2. Independant
  - 3. Judgment
  - 4. license

Question ID : 9895809900  
Chosen Option : 4

Q.1  
0 Select the most appropriate word to fill in the blank.

After reaching New York, Prakash will have to \_\_\_\_\_ himself to the new surroundings.

- Ans
- 1. develop
  - 2. mix
  - 3. submit
  - 4. adapt

Question ID : 9895809903  
Chosen Option : 3

Q.1  
1 Select the meaning of the given idiom.

Bite off more than one can chew

- Ans
- 1. To have an upset stomach
  - 2. To be always hungry
  - 3. To take more than one can deal with
  - 4. To attack fiercely

Question ID : 9895809896  
Chosen Option : 4

Q.1  
2 Select the most appropriate word to fill in the blank.

The authorities have \_\_\_\_\_ into this incident.

- Ans
- 1. examined
  - 2. evaluated
  - 3. tested
  - 4. probed

Question ID : 9895809902  
Chosen Option : 2

Q.1

3 Select the most appropriate option to substitute the underlined segment in the given sentence. If there is no need to substitute it, select No substitution required.

The food is broke down into useful substances that can be absorbed by the body.

- Ans  1. is broken down  
 2. break down  
 3. is breaking down  
 4. No substitution required

Question ID : 9895809882  
Chosen Option : 2

Q.1 Select the antonym of the given word.

4

AGONY

- Ans  1. Suffering  
 2. Affliction  
 3. Pleasure  
 4. Pain

Question ID : 9895809894  
Chosen Option : 1

Q.1 Select the most appropriate option to substitute the underlined segment in the given sentence. If there is no need to substitute it, select No substitution required.

5

Yesterday, Maria was eagerly waited to meet her grandparents.

- Ans  1. No substitution required  
 2. was eagerly waited  
 3. eagerly wait  
 4. was eagerly waiting

Question ID : 9895809881  
Chosen Option : 4

Q.1 Identify the segment in the sentence which contains the grammatical error from the given options.

6

Continuous heavy rainfall may farther worsen the flood situation.

- Ans  1. rainfall may  
 2. Continuous  
 3. farther  
 4. flood situation

Question ID : 9895809879  
Chosen Option : 3

Q.1 Select the word which means the same as the group of words given.

7

A person employed to drive a private or hired car

- Ans  1. Chauffeur  
 2. Astronaut  
 3. Sailor

**X 4. Pilot**

Question ID : 9895809899  
Chosen Option : 4

**Comprehension:**

In the following passage some words have been deleted. Fill in the blanks with the help of the alternatives given. Select the most appropriate option for each number.

Settlements are (1) \_\_\_\_\_ where people build their homes. (2) \_\_\_\_\_ human beings lived on trees and (3) \_\_\_\_\_ caves. When they started (4) \_\_\_\_\_ crops it became (5) \_\_\_\_\_ to have a permanent home.

**SubQuestion No : 18**

**Q.1**  
**8** Select the most appropriate option that will fill in the blank number 1

- Ans**
- X 1.** quarters
  - X 2.** sections
  - X 3.** passages
  - 4. places

Question ID : 9895809887  
Chosen Option : 4

**Comprehension:**

In the following passage some words have been deleted. Fill in the blanks with the help of the alternatives given. Select the most appropriate option for each number.

Settlements are (1) \_\_\_\_\_ where people build their homes. (2) \_\_\_\_\_ human beings lived on trees and (3) \_\_\_\_\_ caves. When they started (4) \_\_\_\_\_ crops it became (5) \_\_\_\_\_ to have a permanent home.

**SubQuestion No : 19**

**Q.1**  
**9** Select the most appropriate option that will fill in the blank number 2

- Ans**
- X 1.** Prior
  - X 2.** Previous
  - 3. Early
  - X 4.** Initial

Question ID : 9895809888  
Chosen Option : 2

**Comprehension:**

In the following passage some words have been deleted. Fill in the blanks with the help of the alternatives given. Select the most appropriate option for each number.

Settlements are (1) \_\_\_\_\_ where people build their homes. (2) \_\_\_\_\_ human beings lived on trees and (3) \_\_\_\_\_ caves. When they started (4) \_\_\_\_\_ crops it became (5) \_\_\_\_\_ to have a permanent home.

**SubQuestion No : 20**

**Q.2**  
**0** Select the most appropriate option that will fill in the blank number 3

- Ans  1. around  
 2. on  
 3. at  
 4. in

Question ID : 9895809889  
Chosen Option : 2

**Comprehension:**

In the following passage some words have been deleted. Fill in the blanks with the help of the alternatives given. Select the most appropriate option for each number.

Settlements are (1) \_\_\_\_\_ where people build their homes. (2) \_\_\_\_\_ human beings lived on trees and (3) \_\_\_\_\_ caves. When they started (4) \_\_\_\_\_ crops it became (5) \_\_\_\_\_ to have a permanent home.

SubQuestion No : 21

Q.2  
1 Select the most appropriate option that will fill in the blank number 4

- Ans  1. growing  
 2. grows  
 3. grown  
 4. grow

Question ID : 9895809890  
Chosen Option : 1

**Comprehension:**

In the following passage some words have been deleted. Fill in the blanks with the help of the alternatives given. Select the most appropriate option for each number.

Settlements are (1) \_\_\_\_\_ where people build their homes. (2) \_\_\_\_\_ human beings lived on trees and (3) \_\_\_\_\_ caves. When they started (4) \_\_\_\_\_ crops it became (5) \_\_\_\_\_ to have a permanent home.

SubQuestion No : 22

Q.2  
2 Select the most appropriate option that will fill in the blank number 5

- Ans  1. needed  
 2. required  
 3. necessary  
 4. requirement

Question ID : 9895809891  
Chosen Option : 1

Q.2  
3 Select the synonym of the given word.

GRATIFICATION

- Ans  1. Dissatisfaction  
 2. Satisfaction

3. Complaint

4. Annoyance

Question ID : 9895809892  
Chosen Option : 1

Q.2  
4 Select the antonym of the given word.

AGREEMENT

Ans  1. Discord

2. Accord

3. Consensus

4. Harmony

Question ID : 9895809895  
Chosen Option : 1

Q.2  
5 Select the meaning of the given idiom.

Under the gun

Ans  1. To be cruel

2. To be brave

3. To be killed

4. To be under pressure

Question ID : 9895809897  
Chosen Option : 3

Section : Hindi Language

Q.1 'अनुवाद' का पर्यायवाची शब्द है -

Ans  1. विवाद

2. प्रतिलिपि

3. अनुकृति

4. भाषान्तर

Question ID : 98958010027  
Chosen Option : --

Q.2 दिए गए वाक्य में रेखांकित खंड को प्रतिस्थापित करने के लिए उपयुक्त विकल्प का चयन करें।

कुछ लोग मुहूर्त देख कर घर में प्रवेश करते हैं ।

Ans  1. गृहयज्ञ

2. गृहागत

3. गृहपति

4. गृहप्रवेश



Q.3 'टका सा जवाब देना' मुहावरे का सही अर्थ है -

- Ans  1. साफ इनकार करना
2. संकट में पड़ना
3. बुरा भला कहना
4. अति क्रुद्ध होना

Q.4 सही वर्तनी वाले शब्द का चयन करें।

- Ans 1. ओशधि
2. ओसधि
3. औषधि
4. अवसधी

Q.5 रिक्त स्थान को भरने के लिए उपयुक्त शब्द का चयन करें।

युवकों को \_\_\_\_\_ बनाना शिक्षा का मुख्य उद्देश्य है।

- Ans 1. भ्रांत
2. स्वावलम्बी
3. परावलम्बी
4. मतावलम्बी

Q.6 दिए गए वाक्य में रेखांकित खंड को प्रतिस्थापित करने के लिए उपयुक्त विकल्प का चयन करें।

जीवन में प्रफुल्लित रहना सीखो।

- Ans 1. परिमित
2. उत्तेजित
3. प्रतिबन्धित
4. हर्षित

Q.7 सही वर्तनी वाले शब्द का चयन करें।

Ans

1. शब्दांश  
2. सबदांश  
3. शब्दांस  
4. सब्दांश

Question ID : 98958010032  
Chosen Option : --

Q.8 'बद्ध' शब्द का विलोम शब्द है-

- Ans
1. बंधन
  2. मोक्ष
  3. प्रतिबंध
  4. मुक्त

Question ID : 98958010024  
Chosen Option : --

Q.9 दिए गए वाक्य का वह भाग ज्ञात करें जिसमें कोई त्रुटि है।

जिस नगर में एक सेठ रहता था, उसी नगर में अनेकों गरीब किसान भी रहते थे।

- Ans
1. अनेकों गरीब किसान भी रहते थे।
  2. उसी नगर में
  3. एक सेठ रहता था,
  4. जिस नगर में

Question ID : 98958010008  
Chosen Option : --

Q.1 रिक्त स्थान को भरने के लिए उपयुक्त शब्द का चयन करें।

संक्षेपण में शब्दों के प्रयोग में \_\_\_\_\_ से काम लेना चाहिए।

- Ans
1. अविवेक
  2. क्रोध
  3. तीव्रता
  4. संयम

Question ID : 98958010015  
Chosen Option : --

Q.1 'सरस्वती' का पर्यावाची शब्द है।

- Ans
1. रमणी
  2. वागीश्वरी
  3. ललना

Comprehension:

निम्नलिखित गद्यांश के रिक्त स्थानों की पूर्ति गद्यांश के नीचे दिए गए प्रश्नों के अनुसार कीजिए-

आप लोगों ने कभी शुद्ध हृदय से इस पर विचार किया है कि माता, मातृभूमि और \_\_\_\_\_ (1) का आप पर कुछ ऋण भी है या नहीं? एक जननी आपको जन्म देती है, एक की गोद में खेल-कूदकर और खा-पीकर आप पुष्ट होते हैं और एक आपको अपने भावों को प्रकट करने की \_\_\_\_\_ (2) दे, आपके सांसारिक जीवन को सुखमय बनाती है। जिसका आप पर इतना उपकार है, उसके लिए कुछ करना क्या आपका परम कर्तव्य नहीं है? प्यारे भाइयो! उठो आलस्य छोड़ो, कमर कसो और अपनी मातृभाषा की सेवा में तत्पर हो जाओ, अपने को \_\_\_\_\_ (3) से मुक्त करो। संसार में \_\_\_\_\_ (4) कहलाओ और मातृसेवकों में अपनी कीर्ति छोड़ जाओ। परंतु ध्यान रहे, यह व्रत साधारण नहीं है। इस व्रत का पालन करना \_\_\_\_\_ (5) की धार पर चलने के समान है।

SubQuestion No : 12

Q.1  
2 गद्यांश में संकेतित रिक्त स्थान (1) के लिए उपयुक्त शब्द होगा।

- Ans
1. मातृभाषा
  2. राष्ट्रभाषा
  3. राजभाषा
  4. संचार भाषा

Comprehension:

निम्नलिखित गद्यांश के रिक्त स्थानों की पूर्ति गद्यांश के नीचे दिए गए प्रश्नों के अनुसार कीजिए-

आप लोगों ने कभी शुद्ध हृदय से इस पर विचार किया है कि माता, मातृभूमि और \_\_\_\_\_ (1) का आप पर कुछ ऋण भी है या नहीं? एक जननी आपको जन्म देती है, एक की गोद में खेल-कूदकर और खा-पीकर आप पुष्ट होते हैं और एक आपको अपने भावों को प्रकट करने की \_\_\_\_\_ (2) दे, आपके सांसारिक जीवन को सुखमय बनाती है। जिसका आप पर इतना उपकार है, उसके लिए कुछ करना क्या आपका परम कर्तव्य नहीं है? प्यारे भाइयो! उठो आलस्य छोड़ो, कमर कसो और अपनी मातृभाषा की सेवा में तत्पर हो जाओ, अपने को \_\_\_\_\_ (3) से मुक्त करो। संसार में \_\_\_\_\_ (4) कहलाओ और मातृसेवकों में अपनी कीर्ति छोड़ जाओ। परंतु ध्यान रहे, यह व्रत साधारण नहीं है। इस व्रत का पालन करना \_\_\_\_\_ (5) की धार पर चलने के समान है।

SubQuestion No : 13

Q.1  
3 गद्यांश में संकेतित रिक्त स्थान (2) के लिए उपयुक्त शब्द होगा।

Ans

1. शक्ति
2. मुक्ति
3. रोक के
4. भक्ति

Question ID : 98958010020  
Chosen Option : --

Comprehension:

निम्नलिखित गद्यांश के रिक्त स्थानों की पूर्ति गद्यांश के नीचे दिए गए प्रश्नों के अनुसार कीजिए-

आप लोगों ने कभी शुद्ध हृदय से इस पर विचार किया है कि माता, मातृभूमि और \_\_\_\_\_ (1) का आप पर कुछ ऋण भी है या नहीं? एक जननी आपको जन्म देती है, एक की गोद में खेल-कूदकर और खा-पीकर आप पुष्ट होते हैं और एक आपको अपने भावों को प्रकट करने की \_\_\_\_\_ (2) दे, आपके सांसारिक जीवन को सुखमय बनाती है। जिसका आप पर इतना उपकार है, उसके लिए कुछ करना क्या आपका परम कर्तव्य नहीं है? प्यारे भाइयो! उठो आलस्य छोड़ो, कमर कसो और अपनी मातृभाषा की सेवा में तत्पर हो जाओ, अपने को \_\_\_\_\_ (3) से मुक्त करो। संसार में \_\_\_\_\_ (4) कहलाओ और मातृसेवकों में अपनी कीर्ति छोड़ जाओ। परंतु ध्यान रहे, यह व्रत साधारण नहीं है। इस व्रत का पालन करना \_\_\_\_\_ (5) की धार पर चलने के समान है।

SubQuestion No : 14

Q.1  
4 गद्यांश में संकेतित रिक्त स्थान (3) के लिए उपयुक्त शब्द होगा।

- Ans
- 1. ईश्वरऋण
  - 2. पितृऋण
  - 3. मातृऋण
  - 4. गुरुऋण

Question ID : 98958010021  
Chosen Option : --

Comprehension:

निम्नलिखित गद्यांश के रिक्त स्थानों की पूर्ति गद्यांश के नीचे दिए गए प्रश्नों के अनुसार कीजिए-

आप लोगों ने कभी शुद्ध हृदय से इस पर विचार किया है कि माता, मातृभूमि और \_\_\_\_\_ (1) का आप पर कुछ ऋण भी है या नहीं? एक जननी आपको जन्म देती है, एक की गोद में खेल-कूदकर और खा-पीकर आप पुष्ट होते हैं और एक आपको अपने भावों को प्रकट करने की \_\_\_\_\_ (2) दे, आपके सांसारिक जीवन को सुखमय बनाती है। जिसका आप पर इतना उपकार है, उसके लिए कुछ करना क्या आपका परम कर्तव्य नहीं है? प्यारे भाइयो! उठो आलस्य छोड़ो, कमर कसो और अपनी मातृभाषा की सेवा में तत्पर हो जाओ, अपने को \_\_\_\_\_ (3) से मुक्त करो। संसार में \_\_\_\_\_ (4) कहलाओ और मातृसेवकों में अपनी कीर्ति छोड़ जाओ। परंतु ध्यान रहे, यह व्रत साधारण नहीं है। इस व्रत का पालन करना \_\_\_\_\_ (5) की धार पर चलने के समान है।

SubQuestion No : 15

Q.1  
5 गद्यांश में संकेतित रिक्त स्थान (4) के लिए उपयुक्त शब्द होगा।

- Ans
- 1. शूरवीर
  - 2. सपूत
  - 3. कपूर
  - 4. कपूत

Question ID : 98958010022  
Chosen Option : --

Comprehension:

निम्नलिखित गद्यांश के रिक्त स्थानों की पूर्ति गद्यांश के नीचे दिए गए प्रश्नों के अनुसार कीजिए-

आप लोगों ने कभी शुद्ध हृदय से इस पर विचार किया है कि माता, मातृभूमि और \_\_\_\_\_ (1) का आप पर कुछ ऋण भी है या नहीं? एक जननी आपको जन्म देती है, एक की गोद में खेल-कूदकर और खा-पीकर आप पुष्ट होते हैं और एक आपको अपने भावों को प्रकट करने की \_\_\_\_\_ (2) दे, आपके सांसारिक जीवन को सुखमय बनाती है। जिसका आप पर इतना उपकार है, उसके लिए कुछ करना क्या आपका परम कर्तव्य नहीं है? प्यारे भाइयो! उठो आलस्य छोड़ो, कमर कसो और अपनी मातृभाषा की सेवा में तत्पर हो जाओ, अपने को \_\_\_\_\_ (3) से मुक्त करो। संसार में \_\_\_\_\_ (4) कहलाओ और मातृसेवकों में अपनी कीर्ति छोड़ जाओ। परंतु ध्यान रहे, यह व्रत साधारण नहीं है। इस व्रत का पालन करना \_\_\_\_\_ (5) की धार पर चलने के समान है।

SubQuestion No : 16

Q.1  
6 गद्यांश में संकेतित रिक्त स्थान (5) के लिए उपयुक्त शब्द होगा।

- Ans
- 1. पानी
  - 2. हसियाँ
  - 3. तलवार
  - 4. चाकू

Question ID : 98958010023  
Chosen Option : --

Q.1  
7 रिक्त स्थान को भरने के लिए उपयुक्त शब्द का चयन करें।

न मैं किसी की उपेक्षा करता हूँ, न किसी प्रकार की \_\_\_\_\_।

- Ans
- 1. अपेक्षा
  - 2. इच्छा
  - 3. लालसा
  - 4. आशंका

Question ID : 98958010016  
Chosen Option : --

Q.1  
8 'प्रत्यक्ष' का विलोम शब्द है -

- Ans
- 1. परोक्ष
  - 2. विहित
  - 3. अभाव
  - 4. निहित

Q.1  
9 'जो अभी तक न आया हो' के लिए एक शब्द प्रयुक्त होता है-

- Ans
- 1. अजन्मा
  - 2. अनागत
  - 3. अकिंचन
  - 4. अनुजा

Q.2  
0 'जहर का घूँट पीना' मुहावरे का सही अर्थ है -

- Ans
- 1. जोखिम में डाल देना
  - 2. खतरा उठाना
  - 3. गुस्सा मन में दबा लेना
  - 4. शर्मिदा होना

Q.2  
1 दिए गए वाक्य में रेखांकित खंड को प्रतिस्थापित करने के लिए उपयुक्त विकल्प का चयन करें।  
वेदान्ती लोग जगत को मिथ्या समझते हैं।

- Ans
- 1. असत्य
  - 2. सत्य
  - 3. अस्थिर
  - 4. भंगुर

Q.2  
2 'अनुचित बात के लिए आग्रह' के लिए एक शब्द है-

- Ans
- 1. दुर्जन
  - 2. आग्रह
  - 3. दुराग्रह
  - 4. कठोर

Q.2  
3 दिए गए वाक्य का वह भाग ज्ञात करें जिसमें कोई त्रुटि है।

सुदर्शन को ज्यामिति का विषय में अनुत्तीर्ण घोषित किया गया।

Ans

✗ 1. अनुत्तीर्ण

2. घोषित किया गया।
3. ज्यामिति का विषय में
4. सुदर्शन को

Question ID : 98958010010  
Chosen Option : --

Q.2  
4 रिक्त स्थान को भरने के लिए उपयुक्त शब्द का चयन करें।

तुम मेरा अपमान मत करो मुझे स्वयं अपने कर्मों पर \_\_\_\_\_ हो रहा है।

Ans

1. संतोष
- ✗ 2. पश्चाताप
- ✗ 3. प्रताप
4. तुष्टि

Question ID : 98958010014  
Chosen Option : --

Q.2  
5 दिए गए वाक्य का वह भाग ज्ञात करें जिसमें कोई त्रुटि है।

शब्दावली को अधिक उपयोगी बनाने के लिए हर संभव प्रयास किया गए हैं।

Ans

1. हर संभव प्रयास किया गए हैं।
2. अधिक उपयोगी
3. बनाने के लिए
4. शब्दावली को

Question ID : 98958010009  
Chosen Option : --

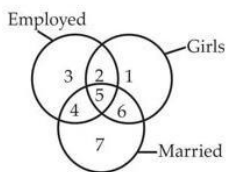


# Constable (GD) in CAPFs, NIA, SSF and Rifleman (GD) in Assam Rifles Examination, 2018

Roll No. :	
Registration No.	
Name :	
Exam Venue :	Arya College of Engineering and Information Technology
Exam Time :	4:00 PM - 5:30 PM
Exam Date :	11/03/2019

Section : **General Section**

**Q.1** Study the diagram below and identify the region representing girls who are employed but unmarried.



- Ans  1. 2  
 2. 4  
 3. 1  
 4. 5

Question ID : **9895809397**  
Chosen Option : 1

**Q.2**

A, B, C, D and E are sitting in a row. C is between D and A, E is neither at the end, nor next to D and is to the left of B who is last. Who is to the right of D?

- Ans  1. B  
 2. E  
 3. A  
 4. C

Question ID : **9895809381**  
Chosen Option : 4

**Q.3**

The statements below are followed by two conclusions labeled I and II. Assuming that the information in the statements is true, even if it appears to be at variance with generally established facts, decide which conclusion(s) logically and definitely follow(s) from the information given in the statements.

Statement 1 : All shells are skins.

Statement 2 : No skins are cats.

Conclusion I : No shells are cats.

- Ans  1. Neither I nor II follows  
 2. Only conclusion I follows  
 3. Both I and II follow  
 4. Only conclusion II follows

Question ID : **9895809384**

Q.4 Choose the option which completes the given figure series



Ans



Question ID : 9895809392  
Chosen Option : 3

Q.5 Four words have been given, out of which three are alike in some manner, while one is different. Choose the odd one.

Ans

1. Scarf

2. Sweater

3. Sunglass

4. Gloves

Question ID : 9895809375  
Chosen Option : 3

Q.6 Four letter clusters have been given, out of which three are alike in some manner, while one is different. Choose the odd one

Ans

1. RSU

2. YAC

3. LNP

4. CEG

Question ID : 9895809374  
Chosen Option : 1

Q.7 A, O, M, H, K and U are sitting in a circle facing the centre. A is NOT sitting next to M or U, U is to the right of H, K is to the left of M, who is opposite O. Who is to the right of O?

Ans

1. H

2. A

3. K

4. U

Question ID : 9895809382  
Chosen Option : 1

Q.8

Choose the option figure in which the problem figure is hidden/embedded.

Question figure:



Ans

✓ 1.



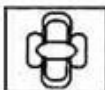
✗ 2.



✗ 3.



✗ 4.



Question ID : 9895809394  
Chosen Option : 1

Q.9 Select the correct option that will fill in the blank and complete the series.

1024, ?, 1600, 2000, 2500, 3125

Ans

✗ 1. 1350

✗ 2. 1440

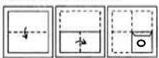
✓ 3. 1280

✗ 4. 1125

Question ID : 9895809387  
Chosen Option : 3

Q.1 In the following questions a piece of paper is folded in the manner shown in the question figure(s). Select the figure out of the answer choices showing the unfolded pattern after the punches (cut).

Question figure:



Ans

✗ 1.



✓ 2.



✗ 3.



✗ 4.



Question ID : 9895809396  
Chosen Option : 2


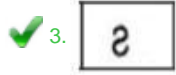
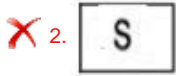
Q.1 Choose the option that most closely resembles the mirror image of the given figure when mirror is placed at right side.

1

Question figure:



Ans



Question ID : 9895809395  
Chosen Option : 3

Q.1 Some boys are sitting in a row facing north. Ganesh is 7th on the left of Akshit. Vinay, who is 20th in the row from left,

2 is 7th on the right of Akshit. If Kamal, who is third on the right of Ganesh, is 20th in the row from right, how many boys are there in the row?

Ans

1. 26

2. 28

3. 31

4. 30

Question ID : 9895809383  
Chosen Option : 2

Q.1 Select the option that is related to the third term in the same way as the second term is related to the first term.

3

Pen : Write :: Knife : \_\_\_\_\_

Ans

1. Cut

2. Shoot

3. Blood

4. Vegetable

Question ID : 9895809376  
Chosen Option : 1

Q.1 Which of the following answer figure will complete the given figure?

4

Question figure



Ans





Question ID : 9895809393  
Chosen Option : 1

Q.1 Select the option that is related to the third term in the same way as the second term is related to the first term.  
5

TSQ : JHG :: LTM : ?

- Ans
- 1. FBC
  - 2. ACD
  - 3. UVO
  - 4. NGO

Question ID : 9895809378  
Chosen Option : 4

Q.1 Select the correct option that will fill in the blank and complete the series.  
6

LM, QR, VW, \_\_\_\_\_

- Ans
- 1. UK
  - 2. AB
  - 3. AD
  - 4. SM

Question ID : 9895809373  
Chosen Option : 2

Q.1 Select the correct combination of mathematical signs to replace '\*\*' signs and to balance the given equation:  
7

$96 * 2 * 20 * 2 * 174$

- Ans
- 1.  $\times - + =$
  - 2.  $\div \times + =$
  - 3.  $- + \times =$
  - 4.  $+ + \div =$

Question ID : 9895809391  
Chosen Option : 1

Q.1 Select the option that is related to the third term in the same way as the second term is related to the first term.  
8

4896 : 3785 :: 7852 : ?

- Ans
- 1. 4519
  - 2. 6741
  - 3. 5630
  - 4. 3438

Question ID : 9895809388  
Chosen Option : 2

Q.1 If MUNREB is written as 628146 and IESRES as 345145, how will SERBER be written?  
9

- Ans
- 1.

 2. 541164

3. 451146

4. 541146

Question ID : 9895809380


Chosen Option : 1


**Q.2** Four options have been given out of which three are alike in some manner, while one is different. Choose the odd one.

0

Ans  1. 97

 2. 135

 3. 167

 4. 199


Question ID : 9895809389


Chosen Option : 2


**Q.2** Select the option that is related to the third term in the same way as the second term is related to the first term.

1

Telephone : Communication :: Radio : \_\_\_\_\_

Ans  1. Broadcast

 2. Story

 3. Art

 4. Character

Question ID : 9895809377

Chosen Option : 1

**Q.2** In the question two statements are given, followed by three conclusions, I, II and III. Assuming that the information in

2

the statements is true, even if it appears to be at variance with generally established facts, decide which conclusion(s) logically and definitely follow(s) from the information given in the statements.


Statement 1 : All tigers are cats.


Statement 2 : All cats are felines.

Conclusion I : Some felines are tigers.

Conclusion II : All tigers are felines.

Conclusion III : Some felines are cats.

Ans  1. Only conclusion III follows

 2. All conclusions I, II and III follows

3. Only conclusion I and III follows

4. Only conclusion I follows

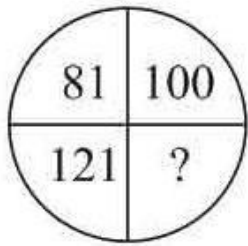
Question ID : 9895809385

Chosen Option : 2

**Q.2**

3

Find the missing number from the below options.



- Ans
- 1. 225
  - 2. 144
  - 3. 256
  - 4. 169

Question ID : 9895809390  
Chosen Option : 2

Q.2 In a certain code, COLD is coded as GSPH, then how is NOT coded in the same way?

- 4
- Ans
- 1. RSX
  - 2. XRS
  - 3. RSY
  - 4. XSR

Question ID : 9895809379  
Chosen Option : 1

Q.2 Select the correct option that will fill in the blank and complete the series.

-1, 2, 7, ?, 23, 34

- Ans
- 1. 13
  - 2. 19
  - 3. 14
  - 4. 15

Question ID : 9895809386  
Chosen Option : 3

Q.2 Which of the following was the first Law Minister of Independent India?

- 6
- Ans
- 1. Jawaharlal Nehru
  - 2. Abul Kalam Azad
  - 3. Bhimrao Ramji Ambedkar
  - 4. Asaf Ali

Question ID : 9895809561  
Chosen Option : 4

Q.2 Photosynthesis in plants converts light energy to \_\_\_\_\_ energy.

- 7
- Ans
- 1. thermal
  - 2. chemical

- 3. kinetic
- 4. physical

Question ID : 9895809565  
Chosen Option : 4

Q.2  
8 The major gap in the Western Ghats is at:

- Ans
- 1. Palghat
  - 2. Mangalore
  - 3. Madurai
  - 4. Manipal

Question ID : 9895809569  
Chosen Option : 3

Q.2  
9 The 'Ghumura' dance is from the state of:

- Ans
- 1. Punjab
  - 2. Odisha
  - 3. Tamil Nadu
  - 4. Kerala

Question ID : 9895809548  
Chosen Option : 1

Q.3  
0 'Matki' is a form of dance from the state of:

- Ans
- 1. Kerala
  - 2. Gujarat
  - 3. Madhya Pradesh
  - 4. West Bengal

Question ID : 9895809549  
Chosen Option : 3

Q.3  
1 The Chola Empire of the South emerged in the:

- Ans
- 1. 9<sup>th</sup> century BC
  - 2. 19<sup>th</sup> century AD
  - 3. 9<sup>th</sup> century AD
  - 4. 17<sup>th</sup> century AD

Question ID : 9895809570  
Chosen Option : 2

Q.3  
2 In the 2016 Olympics men's singles badminton title was won by:

- Ans
- 1. Lee Chong Wei
  - 2. Kidambi Srikanth



3. Chen Long

4. Lin Dan

Question ID : 9895809551  
Chosen Option : 2

Q.3  
3 The British ruled India for nearly:

Ans  1. 50 years

2. 200 years

3. 100 years

4. 500 years

Question ID : 9895809571  
Chosen Option : 2

Q.3  
4 Where did the Chipko movement first start in India?

Ans  1. Tamil Nadu

2. Maharashtra

3. Karnataka

4. Uttar Pradesh

Question ID : 9895809572  
Chosen Option : 2

Q.3  
5 A person who advocates separation of the state from religious institutions is called a \_\_\_\_\_.

Ans  1. Communalist

2. Secularist

3. Socialist

4. Feminist

Question ID : 9895809560  
Chosen Option : 3

Q.3  
6 The Prime Minister who led India during the 1965 war with Pakistan is:

Ans  1. Morarji Desai

2. Indira Gandhi

3. Lal Bahadur Shastri

4. Jawaharlal Nehru

Question ID : 9895809555  
Chosen Option : 2

Q.3  
7 Which is one of the factors of subsistence used to measure the Poverty Line in India?

Ans  1. Equality

2. Education

3. Internet

4. Transportation

Question ID : 9895809557  
Chosen Option : 1

Q.3  
8 The men's title of the 2018 Australian Open Tennis Championship, \_\_\_\_\_ was won by.

- Ans
- 1. Rafael Nadal
  - 2. Roger Federer
  - 3. Stan Warwinka
  - 4. Andy Murray

Question ID : 9895809552  
Chosen Option : 2

Q.3  
9 The 2017 Sahitya Academy award for Bengali was won by:

- Ans
- 1. Himanshu Bose
  - 2. Afsar Ahmed
  - 3. Ramesh Megh
  - 4. David Bhattacharya

Question ID : 9895809553  
Chosen Option : 1

Q.4  
0 The Goods and Services Tax allowed India to become:

- Ans
- 1. An East and a West market
  - 2. A common market
  - 3. A set of separate markets
  - 4. A South and a North market

Question ID : 9895809559  
Chosen Option : 2

Q.4  
1 Which of the following is not a Metamorphic rock?

- Ans
- 1. Gnesis
  - 2. Marble
  - 3. Slate
  - 4. Limestone

Question ID : 9895809563  
Chosen Option : 1

Q.4  
2 The Aga Khan palace is located in the state of:

- Ans
- 1. Maharashtra
  - 2. Uttar Pradesh
  - 3. Kerala
  - 4. Madhya Pradesh

Question ID : 9895809550  
Chosen Option : 2

Q.4  
3 A stain of curry on a white cloth become reddish brown when soap is used because the soap is:

- Ans
- 1. Neutral in nature
  - 2. Acidic in nature
  - 3. Alkaline in nature
  - 4. Basic in nature

Question ID : 9895809564  
Chosen Option : 2

Q.4  
4 Which is the deepest lake in the world?

- Ans
- 1. Lake Tanganyika
  - 2. Lake Vostok
  - 3. Lake Baikal
  - 4. Lake Superior

Question ID : 9895809567  
Chosen Option : 1

Q.4  
5 An ecosystem consists of:

- Ans
- 1. Chemical and physical components
  - 2. Biotic and abiotic components
  - 3. Physical and social components
  - 4. Biotic and antibiotic components

Question ID : 9895809568  
Chosen Option : 1

Q.4  
6 Leguminous plants replenish the soil by the presence of \_\_\_\_\_.

- Ans
- 1. Firmicutes
  - 2. Spirochaete
  - 3. Rhizobium
  - 4. Aquificae

Question ID : 9895809566  
Chosen Option : 3

Q.4  
7 The process of \_\_\_\_\_ is used to increase shelf life of milk by destroying disease causing microorganisms.

- Ans
- 1. pasteurisation
  - 2. evaporation
  - 3. condensation
  - 4. hydrogenation

Question ID : 9895809562  
Chosen Option : 2

Q.4  
8 The railway budget is:

- Ans
1. Part of the Central budget
  2. Part of the States budget
  3. Separate from the Central as well as State budget
  4. Separate from the Central budget

Question ID : 9895809558  
Chosen Option : 3

Q.4 The reign of the \_\_\_\_\_ dynasty has been described as the golden age of Indian civilization.

- Ans
1. Porus
  2. Harsha
  3. Buddha
  4. Gupta

Question ID : 9895809554  
Chosen Option : 3

Q.5 In which year was The Reserve Bank of India was established?

- Ans
1. 1926
  2. 1947
  3. 1950
  4. 1952

Question ID : 9895809556  
Chosen Option : 4

Q.5 The cost price of 27 articles is same as the selling price of 18 articles. What is the profit percent?

- Ans
1. 40%
  2. 50%
  3. 30%
  4. 25%

Question ID : 9895809733  
Chosen Option : 1

Q.5 A train 400 m long passes a pole in 20 seconds. What is the speed of the train?

- Ans
1. 70 km/hr
  2. 72 km/hr
  3. 68 km/hr
  4. 64 km/hr

Question ID : 9895809743  
Chosen Option : 2

Q.5 A discount of 20% in the price of rice enables X to buy 5 kg more rice for ₹100. What is the reduced price of rice per kg?

- Ans
1. ₹3
  2. ₹2

3. ₹1

4. ₹4

Question ID : 9895809728  
Chosen Option : 4

**Q.5** A and B can together complete a task 40 days. They worked together for 30 days and then B left. A finished the remaining task in next 22 days. In how many days A alone can finish the task?

- Ans
1. 48 days
  2. 88 days
  3. 30 days
  4. 40 days

Question ID : 9895809742  
Chosen Option : 2

**Q.5** A hollow copper pipe is 22 cm long and its external diameter is 28 cm. If the thickness of the pipe is 3 cm and iron weighs  $8.5 \text{ g/cm}^3$ , then the weight of the pipe is closest to:

- Ans
1. 34 kg
  2. 44 kg
  3. 14 kg
  4. 24 kg

Question ID : 9895809738  
Chosen Option : 1

**Q.5** The least number that should be added to 2,397 so that the sum is exactly divisible by 3, 4, 5 and 6?

- Ans
1. 6
  2. 4
  3. 5
  4. 3

Question ID : 9895809730  
Chosen Option : 4

**Q.5** The median of 31, 25, 17, 23, 45 and 59 is:

- Ans
1. 23
  2. 25
  3. 31
  4. 28

Question ID : 9895809729  
Chosen Option : 2

**Q.5** Excluding stoppages, the speed of a bus is 70 kmph and including stoppages, it is 56 kmph. For how many minutes does the bus stop per hour?

- Ans
1. 10 min
  2. 8 min
  3. 15 min
  4. 12 min

Question ID : 9895809744  
Chosen Option : 1

Q.5 A and B can complete a task in 40 days and 16 days respectively. A started the task alone and then after 12 days B joined him till the completion of the task. How long did the task last after B joined the task?

- Ans
1. 8 days
  2. 6 days
  3. 14 days
  4. 12 days

Question ID : 9895809741  
Chosen Option : 3

Q.6 A sum of money amounted to ₹720 in 2 years and ₹792 in 3 years when interest is compounded annually. The annual rate of interest, (in %) is:

- Ans
1. 5%
  2. 7.50%
  3. 7%
  4. 10%

Question ID : 9895809727  
Chosen Option : 2

Q.6 In X's opinion, his weight is greater than 60 kg but less than 68 kg. Y doesn't agree with him and says that X's weight is more than 62 kg but less than 70 kg. The mother of X believes that the weight of X is greater than 64 kg. If all of them are correct in their estimation, then what is the average of different probable weights of X, if the weight is in integer?

- Ans
1. 68 kg
  2. 67 kg
  3. 66 kg
  4. 65 kg

Question ID : 9895809724  
Chosen Option : 3

Q.6 The ratio of the number of boys and girls in a college is 6 : 7. If the percentage increase in the number of boys and girls be 20% and 10% respectively, what will be the new ratio?

- Ans
1. 72 : 77
  2. 35 : 36
  3. 36 : 35
  4. 77 : 72

Question ID : 9895809735  
Chosen Option : 3

Q.6 A right triangle with sides 5 cm, 12 cm and 13 cm is rotated about the side 12 cm to form a cone. The volume of the cone so formed is:

- Ans
1.  $81 \pi \text{ cm}^3$
  2.  $100 \pi \text{ cm}^3$
  3.  $91 \pi \text{ cm}^3$
  4.  $110 \pi \text{ cm}^3$

Question ID : 9895809740  
Chosen Option : 3

Q.6  
4 The value of  $64 \div 2 \times (9 \div 3) \times 3 \div 9 - 32$  is:

- Ans
- 1. 1
  - 2. 0
  - 3. -1
  - 4. 2

Question ID : 9895809726  
Chosen Option : 4

Q.6  
5 The average weight of 8 people increases by 2.5 kg when a new person comes in place of one of them weighing 75 kg.  
What is the weight of the new person?

- Ans
- 1. 95 kg
  - 2. 75 kg
  - 3. 85 kg
  - 4. 65 kg

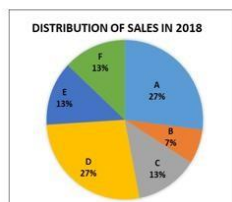
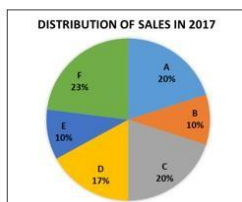
Question ID : 9895809723  
Chosen Option : 3

Q.6  
6 How much time will it take for an amount of ₹360 to yield ₹72 as interest at 5% p.a. of simple interest?

- Ans
- 1. 3 years
  - 2. 4 years
  - 3. 2.5 years
  - 4. 3.5 years

Question ID : 9895809737  
Chosen Option : 1

Q.6  
7 The pie charts show the market share of companies in the rice market in 2017 and 2018. The value of sales of Company A in 2017 was ₹40 lakhs. If its sales grew by 25% in 2018, what was approximate value of sales of company B in 2018?



- Ans
- 1. ₹12.56 lakhs
  - 2. ₹13.96 lakhs
  - 3. ₹12.96 lakhs
  - 4. ₹13.56 lakhs

Question ID : 9895809747  
Chosen Option : 2

Q.6  
8 The value of  $24 \div 4 \times (3 + 3) \div 2$  is:

- Ans
- 1.

- 2. 24
- 3. 20
- 4. 18

Question ID : 9895809725  
Chosen Option : 4

Q.6 120 men consume 720 kg of rice in 30 days. In how many days can 90 men consume 270 kg?

- 9
- Ans  1. 18
2. 12
3. 9
4. 15

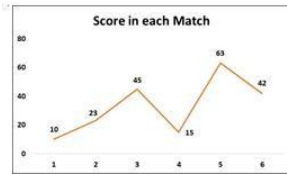
Question ID : 9895809734  
Chosen Option : 1

Q.7 Two students appeared for an examination. One student who scored 20 marks more than the other, his score was 60% of the sum of their marks. What was his score?

- 0
- Ans  1. 80
2. 20
3. 40
4. 60

Question ID : 9895809731  
Chosen Option : 3

Q.7 The line graph shows the scores of a batsman in 6 consecutive matches. What is the range of his scores?



- Ans  1. 53
2. 43
3. 41
4. 51

Question ID : 9895809745  
Chosen Option : 3

Q.7 An article was sold for ₹4,000. Had a discount of 10% was being offered, the profit would have been 20%. The cost price of the article was:

- 2
- Ans 1. ₹3,200
2. ₹3,310
3. ₹3,000
4. ₹3,600

Question ID : 9895809732  
Chosen Option : 4

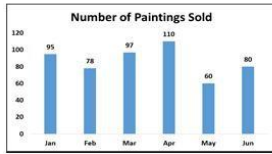
Q.7  
3



- Ans  1.  $169 \pi \text{ m}^2$   
 2.  $172 \pi \text{ m}^2$   
 3.  $165 \pi \text{ m}^2$   
 4.  $180 \pi \text{ m}^2$

Question ID : 9895809739  
Chosen Option : 2

Q.7 The bar graph shows the number of paintings sold by an art gallery in each month from January to June. How many paintings does it need to sell in July for the 7 month average to be 90?



- Ans  1. 115  
 2. 85  
 3. 90  
 4. 110

Question ID : 9895809746  
Chosen Option : 3

Q.7 In a bag there are coins of 25 paise, 50 paise and 1 rupee in the ratio of 3 : 4 : 5. If there are in all ₹31, then how many 1 rupee coins are there in the bag?

- Ans  1. 12  
 2. 16  
 3. 24  
 4. 20

Question ID : 9895809736  
Chosen Option : 4

Section : English Language

Q.1 Select the most appropriate option to substitute the underlined segment in the given sentence. If there is no need to substitute it, select No substitution required.

When the vegetation is altered, the animal life also changed.

- Ans  1. No substitution required  
 2. also changes  
 3. changed  
 4. is changing

Question ID : 9895809908  
Chosen Option : 1

Q.2 Select the most appropriate option to substitute the underlined segment in the given sentence. If there is no need to substitute it, select No substitution required.

The greed of human beings leads to over utilization of natural resources.

- Ans  1. leads for  
 2. No substitution required

3. lead to

4. leading to

Question ID : 9895809909  
Chosen Option : 1

Q.3 Select the meaning of the given idiom.

Piece of cake

Ans 1. Something very difficult

2. Something very tasty

3. Something very easy

4. Something very soft

Question ID : 9895809923  
Chosen Option : 4

Q.4 Select the most appropriate option to substitute the underlined segment in the given sentence. If there is no need to substitute it, select No substitution required.

The term flora is use for denote plants of a particular region or period.

Ans 1. used denoting

2. denoting

3. used to denote

4. No substitution required

Question ID : 9895809907  
Chosen Option : 3

Q.5 Select the meaning of the given idiom.

A snake in the grass

Ans 1. Cowardly and brutal

2. Low and mean

3. An unreliable person

4. A hidden enemy

Question ID : 9895809922  
Chosen Option : 3

Q.6 Select the most appropriate word to fill in the blank.

We should take \_\_\_\_\_ measures to prevent recurrence of such incidents.

Ans  1. substitute

2. effective

3. casual

4. properly

Question ID : 9895809929

Q.7 Select the antonym of the given word.

ILLICIT

- Ans
1. Illegal
  2. Unlawful
  3. Lawful
  4. Illegitimate

Question ID : 9895809921  
Chosen Option : 4

Q.8 Select the word which means the same as the group of words given.

A sentimental longing or wistful affection for a period in the past

- Ans
1. Harmony
  2. Affliction
  3. Nostalgia
  4. Paradise

Question ID : 9895809924  
Chosen Option : 1

Q.9 Select the antonym of the given word.

ABUNDANT

- Ans
1. Ample
  2. Plentiful
  3. Copious
  4. Scarce

Question ID : 9895809920  
Chosen Option : 2

Q.10 Select the most appropriate word to fill in the blank.

Dense mangroves are common varieties with roots submerged \_\_\_\_\_ water.

- Ans
1. beside
  2. over
  3. under
  4. behind

Question ID : 9895809910  
Chosen Option : 3

Comprehension:

In the following passage some words have been deleted. Fill in the blanks with the help of the alternatives given. Select the most appropriate option for each number.

Can you (1) \_\_\_\_\_ a world without human beings? Who but humans (2) \_\_\_\_\_ have utilized the resources and created a (3) \_\_\_\_\_ and cultural environment? The people living in a country are important to (4) \_\_\_\_\_ the economy and the society. They (5) \_\_\_\_\_ are the greatest resource.

SubQuestion No : 11

Q.1  
1 Select the most appropriate option that will fill in the blank number 1.

- Ans
- 1. realize
  - 2. figure
  - 3. devise
  - 4. imagine

Question ID : 9895809913  
Chosen Option : 4

Comprehension:

In the following passage some words have been deleted. Fill in the blanks with the help of the alternatives given. Select the most appropriate option for each number.

Can you (1) \_\_\_\_\_ a world without human beings? Who but humans (2) \_\_\_\_\_ have utilized the resources and created a (3) \_\_\_\_\_ and cultural environment? The people living in a country are important to (4) \_\_\_\_\_ the economy and the society. They (5) \_\_\_\_\_ are the greatest resource.

SubQuestion No : 12

Q.1  
2 Select the most appropriate option that will fill in the blank number 2.

- Ans
- 1. would
  - 2. could
  - 3. can
  - 4. will

Question ID : 9895809914  
Chosen Option : 2

Comprehension:

In the following passage some words have been deleted. Fill in the blanks with the help of the alternatives given. Select the most appropriate option for each number.

Can you (1) \_\_\_\_\_ a world without human beings? Who but humans (2) \_\_\_\_\_ have utilized the resources and created a (3) \_\_\_\_\_ and cultural environment? The people living in a country are important to (4) \_\_\_\_\_ the economy and the society. They (5) \_\_\_\_\_ are the greatest resource.

SubQuestion No : 13

Q.1  
3 Select the most appropriate option that will fill in the blank number 3.

- Ans
- 1.

2. communal

3. general

4. familiar

Question ID : 9895809915  
Chosen Option : 1

**Comprehension:**

In the following passage some words have been deleted. Fill in the blanks with the help of the alternatives given. Select the most appropriate option for each number.

Can you (1) \_\_\_\_\_ a world without human beings? Who but humans (2) \_\_\_\_\_ have utilized the resources and created a (3) \_\_\_\_\_ and cultural environment? The people living in a country are important to (4) \_\_\_\_\_ the economy and the society. They (5) \_\_\_\_\_ are the greatest resource.

SubQuestion No : 14

Q.1  
4 Select the most appropriate option that will fill in the blank number 4.

- Ans  1. evolve  
 2. develop  
 3. mature  
 4. establish

Question ID : 9895809916  
Chosen Option : 2

**Comprehension:**

In the following passage some words have been deleted. Fill in the blanks with the help of the alternatives given. Select the most appropriate option for each number.

Can you (1) \_\_\_\_\_ a world without human beings? Who but humans (2) \_\_\_\_\_ have utilized the resources and created a (3) \_\_\_\_\_ and cultural environment? The people living in a country are important to (4) \_\_\_\_\_ the economy and the society. They (5) \_\_\_\_\_ are the greatest resource.

SubQuestion No : 15

Q.1  
5 Select the most appropriate option that will fill in the blank number 5.

- Ans  1. itself  
 2. themselves  
 3. yourselves  
 4. ourselves

Question ID : 9895809917  
Chosen Option : 2

Q.1  
6 Select the word which means the same as the group of words given.

Violation of something holy or sacred

- Ans  1.

2. Ceremony

3. Sacrilege

4. Pious

Question ID : 9895809925  
Chosen Option : 4

Q.1  
7 Select the synonym of the given word.

ISOLATION

Ans  1. Association

2. Communication

3. Separation

4. Integration

Question ID : 9895809918  
Chosen Option : 3

Q.1  
8 Identify the segment in the sentence which contains the grammatical error from the given options.

Concern above rising pollution led to the launch of various action plans.

Ans  1. Concern above

2. launch of

3. led to

4. action plans

Question ID : 9895809906  
Chosen Option : 3

Q.1  
9 Select the wrongly spelt word.

Ans  1. Ninety

2. Neither

3. Noticeable

4. Neccessary

Question ID : 9895809926  
Chosen Option : 1

Q.2  
0 Select the most appropriate word to fill in the blank.

The house remained \_\_\_\_\_ for a long time.

Ans  1. evicted

2. empty

3. vacant

4. blank

Question ID : 9895809928  
Chosen Option : 3

Q.2

1 Select the wrongly spelt word.

- Ans
- 1. Sacrifice
  - 2. Sanctity
  - 3. Schedule
  - 4. Salry

Question ID : 9895809927  
Chosen Option : 4

Q.2 Identify the segment in the sentence which contains the grammatical error from the given options.

2

Most of the freshwater lake in India are in the Himalayan region.

- Ans
- 1. Most of the
  - 2. in India
  - 3. are in
  - 4. freshwater lake

Question ID : 9895809904  
Chosen Option : 4

Q.2 Select the most appropriate word to fill in the blank.

3

The elephants are the most majestic animals \_\_\_\_\_ the mammals.

- Ans
- 1. as
  - 2. between
  - 3. among
  - 4. over

Question ID : 9895809911  
Chosen Option : 3

Q.2 Select the synonym of the given word.

4

INTEGRATION

- Ans
- 1. Division
  - 2. Separation
  - 3. Unification
  - 4. Segregation

Question ID : 9895809919  
Chosen Option : 1

Q.2 Identify the segment in the sentence which contains the grammatical error from the given options.

5

Rivers has been of primary importance for human settlements since ancient times.

- Ans
- 1. of primary importance
  - 2. Rivers has been
  - 3. since ancient times.
  - 4. for human settlements

Section : Hindi Language

Q.1 दिए गए वाक्य में रेखांकित खंड को प्रतिस्थापित करने के लिए उपयुक्त विकल्प का चयन करें।

अहंकार से भरा व्यक्ति समाज में कभी आदर नहीं पाता ।

- Ans  1. मदालस  
 2. मदांध  
 3. मदमुक्त  
 4. मदपायी

Q.2 दिए गए वाक्य में रेखांकित खंड को प्रतिस्थापित करने के लिए उपयुक्त विकल्प का चयन करें।

तुम्हारी बात बहुत ही तकलीफ देने वाली है।

- Ans  1. कष्टसाध्य  
 2. आकृष्ट  
 3. कष्टभावी  
 4. कष्टदायी

Q.3 रिक्त स्थान को भरने के लिए उपयुक्त शब्द का चयन करें।

मैंने इस कार्य के लिए अधिकारियों से \_\_\_\_\_ स्वीकृति प्राप्त कर ली है।

- Ans  1. निहित  
 2. अस्पष्ट  
 3. वास्तव  
 4. वांछित

Q.4 दिए गए वाक्य का वह भाग ज्ञात करें जिसमें कोई त्रुटि है।

अपनी जीभ को लगाम दो अन्यथा ठीक नहीं होगी।

- Ans  1. लगाम दो  
 2. ठीक नहीं होगी।  
 3. अन्यथा  
 4. अपनी जीभ को



Q.5 'प्रशंसक' का विलोम शब्द है -

- Ans  1. अन्धकार  
 2. समीक्षक  
 3. कटु  
 4. निन्दक

Question ID : 98958010050  
Chosen Option : --

Q.6 'अतिवृष्टि' का विलोम शब्द है -

- Ans  1. प्रतिवृष्टि  
 2. वृष्टि  
 3. अनावृष्टि  
 4. अन्यवृष्टि

Question ID : 98958010051  
Chosen Option : --

Q.7 'उत्सुक' का पर्यायवाची शब्द है -

- Ans  1. मेहनती  
 2. जलसा  
 3. आतुर  
 4. हौसला

Question ID : 98958010053  
Chosen Option : --

Q.8 रिक्त स्थान को भरने के लिए उपयुक्त शब्द का चयन करें।

इस मूर्ति में मानो ईश्वर ही \_\_\_\_\_ हो गए हैं।

- Ans  1. आकार  
 2. निराकार  
 3. विकार  
 4. साकार

Question ID : 98958010041  
Chosen Option : --

Q.9 'आयुष्मान' का पर्यायवाची शब्द है -

- Ans  1. चिरायु  
 2. हर्ष  
 3. मान्यवर

✗ 4. प्रसन्नता

Question ID : 98958010052  
Chosen Option : --

Q.1  
0 'व्यर्थ खर्च करने वाला' के लिए एक शब्द प्रयुक्त होता है-

- Ans
1. व्यापारी
  2. मितव्ययी
  3. खर्चीला
  - ✓ 4. अपव्ययी

Question ID : 98958010056  
Chosen Option : --

Q.1  
1 'हाथ मलते रह जाना' मुहावरे का सही अर्थ है -

- Ans
1. बेकार का काम करना
  - ✗ 2. पछताना
  3. मालिश करना
  4. हाथों को गरम करना

Question ID : 98958010055  
Chosen Option : --

Q.1  
2 सही वर्तनी वाले शब्द का चयन करें।

- Ans
- ✓ 1. नछत्र
  2. नक्षित्र
  - ✗ 3. नक्षत्र
  - ✗ 4. नच्छत्र

Question ID : 98958010058  
Chosen Option : --

Q.1  
3 सही वर्तनी वाले शब्द का चयन करें।

- Ans
1. द्विष्टि
  2. द्विष्टि
  3. द्विष्टि
  4. द्विष्टी

Question ID : 98958010059  
Chosen Option : --

Comprehension:

निम्नलिखित गद्यांश के रिक्त स्थानों की पूर्ति गद्यांश के नीचे दिए गए प्रश्नों के अनुसार कीजिए-

कई दिन वहाँ रहने पर मुझे इस साध्वी की \_\_\_\_\_ (1) के बारे में बहुत कुछ मालूम हो गया। प्रातःकाल उसके आश्रम से निरन्तर आती हुई तुलसीदास के भजनों की स्वर लहरी मेरी सोई हुई आत्मा को \_\_\_\_\_ (2) कर देती थी। कितने दिनों से मैं रेल-पेल व भागमभाग से \_\_\_\_\_ (3) वातावरण में आने की बात सोच रहा था। इस युग में भविष्य के प्रति \_\_\_\_\_ (4) हमें जल्दी निर्णय लेने से रोकती रहती है। फिर भी भीड़ से दूर निकलने की बलवती \_\_\_\_\_ (5) किसके मन में रह-रह कर नहीं जाग उठती है?

SubQuestion No : 14

Q.1  
4 गद्यांश में संकेतित रिक्त स्थान (1) के लिए उपयुक्त शब्द होगा।

- Ans
1. परिक्रमा
  2. परिचर्चा
  3. परिचर्या
  4. दिनचर्या

Question ID : 98958010045

Chosen Option : --

Comprehension:

निम्नलिखित गद्यांश के रिक्त स्थानों की पूर्ति गद्यांश के नीचे दिए गए प्रश्नों के अनुसार कीजिए-

कई दिन वहाँ रहने पर मुझे इस साध्वी की \_\_\_\_\_ (1) के बारे में बहुत कुछ मालूम हो गया। प्रातःकाल उसके आश्रम से निरन्तर आती हुई तुलसीदास के भजनों की स्वर लहरी मेरी सोई हुई आत्मा को \_\_\_\_\_ (2) कर देती थी। कितने दिनों से मैं रेल-पेल व भागमभाग से \_\_\_\_\_ (3) वातावरण में आने की बात सोच रहा था। इस युग में भविष्य के प्रति \_\_\_\_\_ (4) हमें जल्दी निर्णय लेने से रोकती रहती है। फिर भी भीड़ से दूर निकलने की बलवती \_\_\_\_\_ (5) किसके मन में रह-रह कर नहीं जाग उठती है?

SubQuestion No : 15

Q.1  
5 गद्यांश में संकेतित रिक्त स्थान (2) के लिए उपयुक्त शब्द होगा।

- Ans
1. विचलित
  2. जागृत
  3. चंचल
  4. उदास

Comprehension:

निम्नलिखित गद्यांश के रिक्त स्थानों की पूर्ति गद्यांश के नीचे दिए गए प्रश्नों के अनुसार कीजिए-

कई दिन वहाँ रहने पर मुझे इस साध्वी की \_\_\_\_\_ (1) के बारे में बहुत कुछ मालूम हो गया। प्रातःकाल उसके आश्रम से निरन्तर आती हुई तुलसीदास के भजनों की स्वर लहरी मेरी सोई हुई आत्मा को \_\_\_\_\_ (2) कर देती थी। कितने दिनों से मैं रेल-पेल व भागमभाग से \_\_\_\_\_ (3) वातावरण में आने की बात सोच रहा था। इस युग में भविष्य के प्रति \_\_\_\_\_ (4) हमें जल्दी निर्णय लेने से रोकती रहती है। फिर भी भीड़ से दूर निकलने की बलवती \_\_\_\_\_ (5) किसके मन में रह-रह कर नहीं जाग उठती है?

SubQuestion No : 16

Q.1  
6 गद्यांश में संकेतित रिक्त स्थान (3) के लिए उपयुक्त शब्द होगा।

- Ans
- 1. संलग्न
  - 2. शांत
  - 3. दूषित
  - 4. प्रभावित

Comprehension:

निम्नलिखित गद्यांश के रिक्त स्थानों की पूर्ति गद्यांश के नीचे दिए गए प्रश्नों के अनुसार कीजिए-

कई दिन वहाँ रहने पर मुझे इस साध्वी की \_\_\_\_\_ (1) के बारे में बहुत कुछ मालूम हो गया। प्रातःकाल उसके आश्रम से निरन्तर आती हुई तुलसीदास के भजनों की स्वर लहरी मेरी सोई हुई आत्मा को \_\_\_\_\_ (2) कर देती थी। कितने दिनों से मैं रेल-पेल व भागमभाग से \_\_\_\_\_ (3) वातावरण में आने की बात सोच रहा था। इस युग में भविष्य के प्रति \_\_\_\_\_ (4) हमें जल्दी निर्णय लेने से रोकती रहती है। फिर भी भीड़ से दूर निकलने की बलवती \_\_\_\_\_ (5) किसके मन में रह-रह कर नहीं जाग उठती है?

SubQuestion No : 17

Q.1  
7 गद्यांश में संकेतित रिक्त स्थान (4) के लिए उपयुक्त शब्द होगा।

- Ans
- 1. आशंका
  - 2. निश्चिन्त

3. आशा  
 4. हताशा

Question ID : 98958010048  
Chosen Option : --

Comprehension:

निम्नलिखित गद्यांश के रिक्त स्थानों की पूर्ति गद्यांश के नीचे दिए गए प्रश्नों के अनुसार कीजिए-

कई दिन वहाँ रहने पर मुझे इस साध्वी की \_\_\_\_\_ (1) के बारे में बहुत कुछ मालूम हो गया। प्रातःकाल उसके आश्रम से निरन्तर आती हुई तुलसीदास के भजनों की स्वर लहरी मेरी सोई हुई आत्मा को \_\_\_\_\_ (2) कर देती थी। कितने दिनों से मैं रेल-पेल व भागमभाग से \_\_\_\_\_ (3) वातावरण में आने की बात सोच रहा था। इस युग में भविष्य के प्रति \_\_\_\_\_ (4) हमें जल्दी निर्णय लेने से रोकती रहती है। फिर भी भीड़ से दूर निकलने की बलवती \_\_\_\_\_ (5) किसके मन में रह-रह कर नहीं जाग उठती है?

SubQuestion No : 18

Q.1  
8 गद्यांश में संकेतित रिक्त स्थान (5) के लिए उपयुक्त शब्द होगा।

- Ans  1. लालसा  
 2. इच्छा  
 3. उत्सुकता  
 4. तृष्णा

Question ID : 98958010049  
Chosen Option : --

Q.1  
9 दिए गए वाक्य का वह भाग ज्ञात करें जिसमें कोई त्रुटि है।

बच्चों ने साधनों के अभाव में पढ़ना छोड़ दी।

- Ans 1. साधनों के  
2. बच्चों ने  
3. अभाव में  
4. पढ़ना छोड़ दी।

Question ID : 98958010036  
Chosen Option : --

Q.2  
0 'तलवार की धार पर चलना' मुहावरे का सही अर्थ है -

- Ans 1. सीधी रेखा पर चलना  
2. मेहनत करना

✓ 3. संकटपूर्ण कठिन काम करना

4. सरल कार्य करना

Question ID : 98958010054  
Chosen Option : --

Q.2 <sub>1</sub> दिए गए वाक्य में रेखांकित खंड को प्रतिस्थापित करने के लिए उपयुक्त विकल्प का चयन करें।

शरण में आये व्यक्ति की सुरक्षा करनी चाहिये।

Ans ✓ 1. शरणागत

2. शरणप्रिय

3. शरणमुक्त

4. आरक्षित

Question ID : 98958010038  
Chosen Option : --

Q.2 <sub>2</sub> दिए गए वाक्य का वह भाग ज्ञात करें जिसमें कोई त्रुटि है।

प्राचीन काल में होली का त्योहार समूह तौर में मनाया जाता था।

Ans 1. प्राचीन काल में

2. होली का त्योहार

3. समूह तौर में

✗ 4. मनाया जाता था।

Question ID : 98958010034  
Chosen Option : --

Q.2 <sub>3</sub> रिक्त स्थान को भरने के लिए उपयुक्त शब्द का चयन करें।

वर्तमान \_\_\_\_\_ में भी महात्मा गांधी के विचारों का महत्व कम नहीं होता।

Ans 1. घटनाओं

2. क्षेत्र

3. संदर्भ

4. कार्यकलापों

Question ID : 98958010042  
Chosen Option : --

Q.2 <sub>4</sub> रिक्त स्थान को भरने के लिए उपयुक्त शब्द का चयन करें।

कलाकार में जन्मजात \_\_\_\_\_ होती है।

Ans 1. प्रतिभा

2. शक्ति

✗ 3. रुचि

✗ 4. विधा

Question ID : 98958010040  
Chosen Option : --

Q.2  
5 जिसका परिमाण न जाना जा सके' के लिए एक शब्द प्रयुक्त होता है-

Ans

1. अपरिहार्य
2. अपरिमेय
3. अपरिणाम
4. अपरिमाण

Question ID : 98958010057  
Chosen Option : --