

**Constable (GD) in CAPFs, NIA, SSF and Rifleman (GD) in Assam Rifles Examination, 2018**

Roll No. :	
Registration No.	
Name :	
Exam Venue :	iON Digital Zone iDZ Ramakrishna Colony
Exam Time :	9:00 AM - 10:30 AM
Exam Date :	12/02/2019

Section : **General Section**

**Q.1** The statements below are followed by two conclusions labeled I and II. Assuming that the information in the statements is true, even if it appears to be at variance with generally established facts, decide which conclusion(s) logically and definitely follow(s) from the information given in the statements.

**Statements:**

1. All pupils are crows.
2. All crows are cats.

**Conclusion**

- I. All cats are crows.
- II. Some crows are pupils.

- Ans**
1. Only conclusion I follows.
  2. Both conclusions follow.
  3. Either conclusion I or conclusion II follows.
  4. Only conclusion II follows.

Question ID : 9895802535  
Chosen Option : 4

**Q.2** Select the option that is related to the third term in the same way as the second term is related to the first term.

- Ans** Lethargy : Alertness :: Peace : ?
1. Cheer
  2. Chaos
  3. Chat
  4. Choose

Question ID : 9895802528  
Chosen Option : 1

**Q.3** Select the option that is related to the third number in the same way as the second number is related to the first number.

- Ans** 22 : 11 :: 221
1. 221
  2. 144
  3. 275
  4. 169

Question ID : 9895802539  
Chosen Option : 2

**Q.4**

Select the correct option that will fill in the blank and complete the series.

RTN, SRO, TPP, UNQ, ?

- Ans
- 1. VJR
  - 2. VLP
  - 3. VLR
  - 4. VIP

Question ID : 9895802524  
Chosen Option : 3

Q.5 There is only one runway which will be used by seven flights one by one. P and Q will use the runway neither first nor last. S will use it second after R. M will use it second before O. N will use it after O and before R. Q will use it just before S. Who will use the runway third after O?

- Ans
- 1. N
  - 2. P
  - 3. R
  - 4. Q

Question ID : 9895802534  
Chosen Option : 3

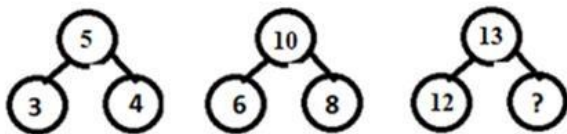
Q.6 Identify the decimal number that will come next in the following series.

10, 9.9, 9.89, 9.889, 9.8889, \_\_\_\_\_

- Ans
- 1. 9.88999
  - 2. 9.88888
  - 3. 9.98889
  - 4. 9.88889

Question ID : 9895802538  
Chosen Option : 4

Q.7 Select the option that will correctly replace the question mark (?) in the given pattern.



- Ans
- 1. 7
  - 2. 11
  - 3. 13
  - 4. 5

Question ID : 9895802541  
Chosen Option : 2

Q.8 In a certain code, VIRUS is written as 46. How will CRUST be written in that code?

- Ans
- 1. 59
  - 2. 57
  - 3. 54
  - 4. 55

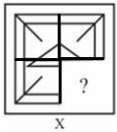
Question ID : 9895802531  
Chosen Option : 3

Q.9 Four numbers have been given out of which three are alike in some manner, while one is different. Choose the odd one.

- Ans
- 1. 317
  - 2. 561
  - 3. 215
  - 4. 419

Question ID : 9895802540  
Chosen Option : 3

Q.1 Select a figure from amongst the four alternatives, that when placed in the blank space (?) of figure X will complete the pattern. (Rotation is not allowed).



- Ans
- 1.
  - 2.
  - 3.
  - 4.

Question ID : 9895802544  
Chosen Option : 3

Q.1 Choose the option that most closely resembles the mirror image of the given word if the mirror is placed at the right side.

PROWESS

- Ans
- 1.
  - 2.
  - 3.
  - 4.

Question ID : 9895802546  
Chosen Option : 3


Q.1 2 Choose the option in which the figure marked 'X' is embedded.



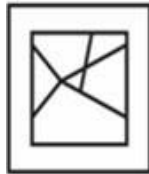
X

Ans

1.



2.



3.



4.



Question ID : 9895802545  
Chosen Option : 2

Q.1 3 Eight friends A, B, C, D, E, F, H and G are sitting around a circular table facing each other for a group discussion. A is opposite F and second to the right of E. G is between C and A. H is to the left of E. Who is sitting second to the left of C?

Ans  1. C

2. A

3. F

4. D

Question ID : 9895802533  
Chosen Option : 2

Q.1 4 In a certain code, LIGHT is written as GSTRO. How will GYPSY be written in that code?

Ans  1. BHOBT

2. BHJBT

3. BHKBT

4. BHHBT

Question ID : 9895802530  
Chosen Option : 3

Q.1

5 Choose the odd word out of the options.

- Ans  1. KENYA  
 2. LONDON  
 3. LISBON  
 4. BANGKOK

Question ID : 9895802526  
Chosen Option : 4

Q.1 Seven friends O, P, Q, R, S, T and U are watching a cricket match sitting in a stadium. P is sitting at one extreme end. T is sitting between Q and U, and R is sitting to the immediate right of S and immediate left of Q. U is sitting second to the left of P. Who is sitting second to the left of T?

- Ans  1. P  
 2. U  
 3. R  
 4. Q

Question ID : 9895802532  
Chosen Option : 3

Q.1 Find out the two signs to be interchanged to make the following equation correct.

$$25 + 26 \times 2 - 7 \div 3 = 17$$

- Ans  1. - and  $\times$   
 2. - and  $\div$   
 3.  $\times$  and  $\div$   
 4. + and -

Question ID : 9895802542  
Chosen Option : 1

Q.1 Which number will follow next in the given number series?

2, 37, 82, 137, ?

- Ans  1. 202  
 2. 247  
 3. 147  
 4. 182

Question ID : 9895802537  
Chosen Option : 4

Q.1 The statements below are followed by two conclusions labeled I and II. Assuming that the information in the statements is true, even if it appears to be at variance with generally established facts, decide which conclusion(s) logically and definitely follow(s) from the information given in the statements.

Statements:

1. Some joules are energies.
2. Some energies are radiuses.

Conclusion:

- I. Some radiuses are energies.
- II. Some energies are joules.

- Ans  1.

- 2. Both conclusions follow.
- 3. Only conclusion I follows.
- 4. Only conclusion II follows.

Question ID : 9895802536  
Chosen Option : 2

Q.2 Select the option that is related to the third term in the same way as the second term is related to the first term.  
0

Fierce : Violent :: Fallacy : ?

- Ans
- 1. Ego
  - 2. War
  - 3. Fall
  - 4. Illusion

Question ID : 9895802527  
Chosen Option : 3

Q.2 Select the option that is related to the third term in the same way as the second term is related to the first term.  
1

BFI : AGK :: DGJ : ?

- Ans
- 1. HCL
  - 2. HCI
  - 3. CHL
  - 4. CHC

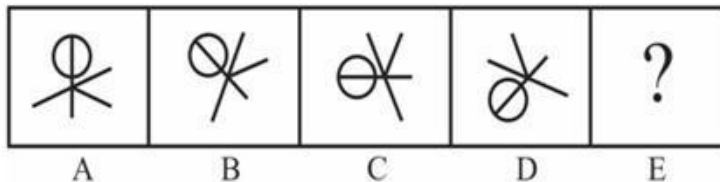
Question ID : 9895802529  
Chosen Option : 3


Q.2 Which one of the following four-letter clusters does NOT belong to the group?  
2

- Ans
- 1. JKN
  - 2. GMO
  - 3. DPN
  - 4. TIF

Question ID : 9895802525  
Chosen Option : 1

Q.2 Choose the option that would follow next in the given figure series.  
3



- Ans
- 1. 


✗ 2.



✓ 3.



✗ 4.



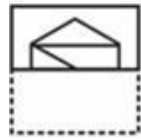
Question ID : 9895802543  
Chosen Option : 3

Q.2 A square transparent sheet with a pattern is given. How will the pattern appear when the transparent sheet is folded along the dotted line?

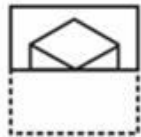


Ans

✗ 1.



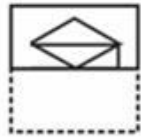
✓ 2.



✗ 3.



✗ 4.



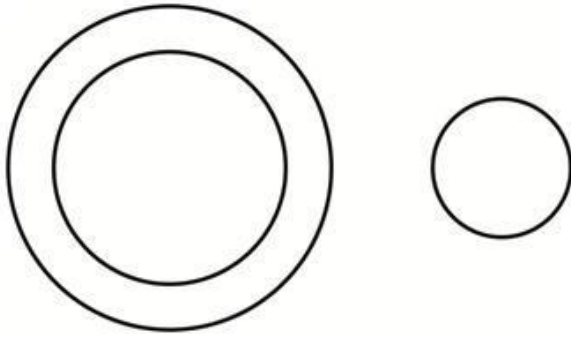
Question ID : 9895802547  
Chosen Option : 2

Q.2 5 Select the Venn diagram that best represents the given set of classes.

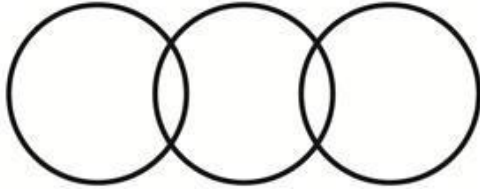
Squirrels, Parrots, Mammals

Ans


✓ 1.




✗ 2.



✗ 3.



✗ 4.



Question ID : 9895802548  
Chosen Option : 1

Q.2 \_\_\_\_\_ is a form of Sufi devotional music which originated in the Indian subcontinent.  
6

- Ans
1. Qawwali
  2. Teej Geet
  - ✗ 3. Basant Geet
  4. Kajri

Question ID : 9895803093  
Chosen Option : 4

Q.2 'The Story Of My Experiments With Truth' is the autobiography of \_\_\_\_\_.  
7

- Ans
- ✓ 1. Mahatma Gandhi
  - ✗ 2. APJ Abdul Kalam



3. Jawaharlal Nehru

4. Narendra Modi

Question ID : 9895803097  
Chosen Option : 3

Q.2 In the Indian constitution the section on Citizenship draws inspiration from which country's constitution?  
8

Ans  1. France

2. USA

3. Australia

4. UK

Question ID : 9895803090  
Chosen Option : 2

Q.2 \_\_\_\_\_ is generally sandy in texture and saline in nature.  
9

Ans  1. Alluvial soil

2. Black soil

3. Laterite soil

4. Arid soil

Question ID : 9895803086  
Chosen Option : 1

Q.3 \_\_\_\_\_ are receipts of the government which are non-redeemable.  
0

Ans 1. Tax receipts

2. Direct receipts

3. Revenue receipts

4. Indirect receipts

Question ID : 9895803088  
Chosen Option : 4

Q.3 Who is the Cabinet Minister currently responsible for Youth Affairs And Sports in the Government of India?  
1

Ans 1. Rajyavardhan Singh Rathore

2. Sushma Swaraj

3. Nitin Gadkari

4. Vijay Goel

Question ID : 9895803082  
Chosen Option : 1

Q.3 The Lakshwdeep islands are located in the \_\_\_\_\_.  
2

Ans  1. Indian Ocean

2. Pacific Ocean

3. Arabian Sea

4. Bay of Bengal

Question ID : 9895803084  
Chosen Option : 3

Q.3 The Indian football player \_\_\_\_\_ became the second highest scorer in the world as on June 2018.

3

Ans

1. Gurpreet Singh
2. Sunil Chhetri
3. Bhaichung Bhutia
4. IM Vijayan

Question ID : 9895803098  
Chosen Option : 2

Q.3 \_\_\_\_\_ capital refers to the variety of raw material and money in hand during the production.

4

Ans

1. Fixed
2. Working
3. Human
4. Physical

Question ID : 9895803087  
Chosen Option : 1

Q.3 The study of viruses is called \_\_\_\_\_.

5

Ans

1. biology
2. pathology
3. paedology
4. virology

Question ID : 9895803099  
Chosen Option : 4

Q.3 The Gandhi – Irwin Pact was associated to which of the following movements of India?

6

Ans

1. Rowlatt
2. Civil Disobedience
3. Non co-operation
4. Quit India

Question ID : 9895803079  
Chosen Option : 4

Q.3 The procedure to remove waste products and excess fluid from the blood when the kidneys stop working properly is called \_\_\_\_\_.

7

Ans

1. circulation
2. filtration
3. purification
4. dialysis

Question ID : 9895803102  
Chosen Option : 2

Q.3  
8 Jammu and Kashmir has been given special status under Article \_\_\_\_\_.

- Ans
- 1. 370
  - 2. 100
  - 3. 111
  - 4. 12

Question ID : 9895803091  
Chosen Option : 1

Q.3  
9 The small pores on the lower surface of the leaf are called \_\_\_\_\_.

- Ans
- 1. pore
  - 2. opening
  - 3. cilia
  - 4. stomata

Question ID : 9895803101  
Chosen Option : 1

Q.4  
0 The economist \_\_\_\_\_ received the Noble prize in 1998.

- Ans
- 1. Dr. Manmohan Singh
  - 2. Raghuram Rajan
  - 3. Amartya Sen
  - 4. Abhijit Vinayak Banerjee

Question ID : 9895803089  
Chosen Option : 3

Q.4  
1 \_\_\_\_\_ are the nomads of the Jammu and Kashmir.

- Ans
- 1. Bhotiyas
  - 2. Gaddi Shepherds
  - 3. Sherpas
  - 4. Gujjar Bakarwals

Question ID : 9895803080  
Chosen Option : 2

Q.4  
2 \_\_\_\_\_ is the most ductile metal from the following.

- Ans
- 1. Iron
  - 2. Aluminium
  - 3. Copper
  - 4. Gold

Question ID : 9895803100  
Chosen Option : 2

Q.4  
3 The Hawa Mahal is located in which city \_\_\_\_\_.

- Ans
- 1. Delhi
  - 2. Jaipur
  - 3. Gujarat
  - 4. Agra

Question ID : 9895803094  
Chosen Option : 2

Q.4  
4 The Judicial system in India contains a hierarchy of courts where \_\_\_\_\_ is the Highest.

- Ans
- 1. Supreme court
  - 2. Village Panchayat
  - 3. High Court
  - 4. District Court

Question ID : 9895803092  
Chosen Option : 1

Q.4  
5 Who among the following was inspired by the ideals of the French Revolution?

- Ans
- 1. Tipu Sultan
  - 2. Aurobindo Gosh
  - 3. Annie Besant
  - 4. Badruddin Tyabji

Question ID : 9895803081  
Chosen Option : 1

Q.4  
6 Which of the following is NOT a tributary of the river Indus?

- Ans
- 1. Ravi
  - 2. Jhelum
  - 3. Chenab
  - 4. Ganges

Question ID : 9895803085  
Chosen Option : 3

Q.4  
7 \_\_\_\_\_ is the youngest recipient of the Rajiv Gandhi Khel Ratan Award.

- Ans
- 1. Geet Sethi
  - 2. Virat Kohli
  - 3. Vishwanathan Anand
  - 4. Abhinav Bindra

Question ID : 9895803083  
Chosen Option : 3

Q.4  
8 Which of the following reacts with water?

- Ans
- 1. Silver
  - 2. Copper
  - 3. Lead
  - 4. Calcium

Question ID : 9895803103  
Chosen Option : 3

Q.4  
9 Lathmaar Holi is celebrated in \_\_\_\_\_.

- Ans
- 1. Varanasi
  - 2. Ayodhya
  - 3. Dwarka
  - 4. Barsana and Nandgaon

Question ID : 9895803095  
Chosen Option : 4

Q.5  
0 \_\_\_\_\_ is India's first wicket keeper to have taken 300 catches.

- Ans
- 1. MS Dhoni
  - 2. Virender Sehwag
  - 3. Suresh Raina
  - 4. Sourav Ganguly

Question ID : 9895803096  
Chosen Option : 1

Q.5  
1 What is the value of  $\left[6\frac{1}{5} \times \frac{5}{6} \text{ of } \left(\frac{2}{5} - \frac{16}{62} + \frac{11}{62}\right)\right]$ ?

- Ans
- 1.  $\frac{47}{108}$
  - 2.  $\frac{33}{20}$
  - 3.  $\frac{47}{62}$
  - 4.  $\frac{43}{108}$

Question ID : 9895804260  
Chosen Option : 1

Q.5  
2

The data given below shows the number of people who have saved a certain amount of money.

Savings (in ₹)	Number of people
5	1
15	3
20	4
25	2
30	1
35	1
40	2

What is the mode of the given data?

- Ans  1. ₹ 20  
 2. ₹ 30  
 3. ₹ 25  
 4. ₹ 15

Question ID : 9895804265  
Chosen Option : 2

Q.5  
3 What will be the average of first four positive multiples of 8?

- Ans  1. 16  
 2. 20  
 3. 32  
 4. 24

Question ID : 9895804263  
Chosen Option : 2

Q.5 The average age of 50 teachers of a school is 66 years and the average age of 60 teachers of another school is 55 years.

4 What will be average age of teachers of both the schools together?

- Ans  1. 60 years  
 2. 57.5 years  
 3. 65 years  
 4. 62.5 years

Question ID : 9895804262  
Chosen Option : 4

Q.5 The height of a cone is 24 cm and radius of its base 10 cm. If the rate of painting it is ₹ 28/cm<sup>2</sup>, then what will be the total cost in painting the cone from outside?

- Ans  1. ₹ 18880  
 2. ₹ 20820

3. ₹ 17660

4. ₹ 22880

Question ID : 9895804279  
Chosen Option : 3

**Q.5** Anil goes to his office at the speed of 35 km/hr and returns to his home at the speed of 30 km/hr. If he takes total 39  
**6** hours, then what is the distance between his office and home?

Ans  1. 420 km

2. 525 km

3. 630 km

4. 210 km

Question ID : 9895804277  
Chosen Option : 2

**Q.5** The price of two articles are in the ratio of 4 : 3 respectively. The price of first article is increased by 50% and the price  
**7** of second article is decreased by 10%. If the new price of second article is ₹ 54, then what was the original price of first article?

Ans  1. ₹ 120

2. ₹ 80

3. ₹ 100

4. ₹ 90

Question ID : 9895804271  
Chosen Option : 4

**Q.5** Selling price and cost price of a book are in the ratio of 3 : 4. What will be the profit/loss percentage?  
**8**

Ans  1. 25% loss

2. 33.33% profit

3. 66.66% loss

4. 20% profit

Question ID : 9895804268  
Chosen Option : 2

**Q.5** C alone can complete a work in 20 days and D alone can complete the same work in 30 days. In how many days C and  
**9** D together can complete the same work?

Ans 1. 6 days

2. 12 days

3. 15 days

4. 8 days

Question ID : 9895804274  
Chosen Option : 2

**Q.6** What will be the difference between the compound interest (interest is compounded annually) and simple interest on a  
**0** sum of ₹ 3200 at the rate of 20% per annum for 2 years?

Ans  1. ₹ 128

2. ₹ 148

3. ₹ 132

4. ₹ 96

Question ID : 9895804273  
Chosen Option : 3

Q.6  
1 What will be the Highest Common Factor of

$2^3 \times 3^5 \times 5^5$  and  $3^1 \times 5^2 \times 7^1$ ?

- Ans
- 1.  $2^1 \times 3^1 \times 5^2$
  - 2.  $2^1 \times 3^1 \times 5^2 \times 7^1$
  - 3.  $2^3 \times 3^5 \times 5^7 \times 7^1$
  - 4.  $3^1 \times 5^2$

Question ID : 9895804259  
Chosen Option : 3

Q.6  
2 What is the value of  $\left[4 + 200 \div 50 + \frac{3}{2} \text{ of } \left(\frac{1}{5} - \frac{1}{4}\right)\right]$ ?

- Ans
- 1.  $\frac{317}{40}$
  - 2.  $\frac{323}{40}$
  - 3.  $\frac{337}{40}$
  - 4.  $\frac{329}{40}$

Question ID : 9895804261  
Chosen Option : 4

Q.6  
3 A sum becomes 14 times of itself in 15 years at the rate of simple interest per annum. In how many years will the sum becomes 92 times of itself?

- Ans
- 1. 91 years
  - 2. 195 years
  - 3. 105 years
  - 4. 210 years

Question ID : 9895804272  
Chosen Option : 3

Q.6  
4 B is 20% more than A and C is 25% more than B. If C = 330, then what will be the value of A?

- Ans
- 1. 198
  - 2. 214
  - 3. 250
  - 4. 220

Question ID : 9895804266  
Chosen Option : 2

Q.6  
5



The table given below shows the runs scored by 4 different batsmen B1, B2, B3 and B4 in 5 different matches of a series.

	Matches				
	M1	M2	M3	M4	M5
B1	120	95	83	86	20
B2	12	8	0	196	52
B3	23	36	45	19	27
B4	56	65	85	45	42

What is the per match average number of run scored by batsman B3?

- Ans
- 1. 36
  - 2. 35
  - 3. 28
  - 4. 30

Question ID : 9895804281  
Chosen Option : 4

Q.6 The table given below shows the runs scored by 4 different batsmen B1, B2, B3 and B4 in 5 different matches of a series.

	Matches				
	M1	M2	M3	M4	M5
B1	120	95	83	86	20
B2	12	8	0	196	52
B3	23	36	45	19	27
B4	56	65	85	45	42

What is the difference in the total number of runs scored by B1 and B4 in these 5 matches?

- Ans
- 1. 98
  - 2. 111
  - 3. 87
  - 4. 124

Question ID : 9895804283  
Chosen Option : 4

Q.6 The length and breadth of a rectangular garden is 12 cm and 9 cm. What will be the area of the rectangular garden?

- Ans
- 1.  $96 \text{ cm}^2$
  - 2.  $112 \text{ cm}^2$
  - 3.  $84 \text{ cm}^2$
  - 4.  $108 \text{ cm}^2$

Question ID : 9895804278  
Chosen Option : 2

Q.6 If  $A : B : C = 4 : 5 : 6$ , then what is the ratio of  $(1/A) : (1/B) : (1/C)$ ?

- Ans
- 1. 15 : 10 : 12
  - 2. 10 : 12 : 15
  - 3. 15 : 12 : 10
  - 4. 12 : 10 : 15

Question ID : 9895804269  
Chosen Option : 2

Q.6 The perimeter of a rectangular table is 48 cm. If the area of the rectangular table is  $128 \text{ cm}^2$ , then what will be the length of the table?

- Ans  1. 10 cm  
 2. 18 cm  
 3. 16 cm  
 4. 12 cm

Question ID : 9895804280  
Chosen Option : 3

Q.7 Rahul purchased 80 items from the market. 25% items of the total items were defective and the remaining items were sold at 50% profit. What will be the overall profit percentage?

- Ans  1. 10%  
 2. 12.5%  
 3. 11.11%  
 4. 9.09%

Question ID : 9895804267  
Chosen Option : 2

Q.7 If  $a : b = 4 : 5$ , then what will be the ratio of  $(a/b) : (b/a)$ ?

- Ans  1. 4 : 5  
 2. 5 : 4  
 3. 16 : 25  
 4. 1 : 1

Question ID : 9895804270  
Chosen Option : 1

Q.7 The table given below shows the runs scored by 4 different batsmen B1, B2, B3 and B4 in 5 different matches of a series.

	Matches				
	M1	M2	M3	M4	M5
B1	120	95	83	86	20
B2	12	8	0	196	52
B3	23	36	45	19	27
B4	56	65	85	45	42

What is the per batsman average runs scored by these batsmen in M5?

- Ans  1. 38.50  
 2. 39.25  
 3. 35.25  
 4. 32.75

Question ID : 9895804282  
Chosen Option : 2

Q.7 Vivek, Dev and Lalit alone can complete a work in 10 days, 15 days and 20 days respectively. In how many days Vivek and Dev together can complete half of the same work?

- Ans  1. 9 days  
 2. 5 days  
 3. 3 days  
 4. 6 days

Question ID : 9895804275  
Chosen Option : 3

Q.7 An article is sold for ₹ 5360 after giving discount of 20%. What is the marked price of article?  
4

- Ans
- 1. ₹ 6800
  - 2. ₹ 6700
  - 3. ₹ 6620
  - 4. ₹ 7000

Question ID : 9895804264  
Chosen Option : 2

Q.7 If a person is driving a car at a speed of 30 m/s, then in how much time person will cover a distance of 1620 km?  
5

- Ans
- 1. 54 hr
  - 2. 15 hr
  - 3. 13 hr
  - 4. 12 hr

Question ID : 9895804276  
Chosen Option : 4

Section : English Language

Q.1 Select the most appropriate synonym of the given word.

ENORMOUS

- Ans
- 1. Keen
  - 2. Grand
  - 3. Huge
  - 4. Puny

Question ID : 9895804124  
Chosen Option : 3

Q.2 Fill in the blanks with the most appropriate words.

Rohit taught you such tricks as these, \_\_\_\_\_?

- Ans
- 1. didn't he
  - 2. hasn't he
  - 3. has he
  - 4. did he

Question ID : 9895804114  
Chosen Option : 1

Q.3 Select the word which means the same as the group of words given.

A person with odd personality

- Ans
- 1. Eccentric
  - 2. Egoist
  - 3. Entomologist

4. Ecologist

Question ID : 9895804127  
Chosen Option : 1

Q.4 Select the word which means the same as the group of words given.

Handwriting that cannot be read

- Ans
1. Legible
  2. Corrigible
  3. Negligible
  4. Illegible

Question ID : 9895804128  
Chosen Option : 4

Q.5 Identify the segment in the sentence which contains the grammatical error from the given options.

Buses run from this bus stand every few minutes because you shall not have to wait.

- Ans
1. Buses run from
  2. every few minutes
  3. have to wait
  4. because you shall

Question ID : 9895804106  
Chosen Option : 3

Q.6 Identify the segment in the sentence which contains the grammatical error from the given options.

She gave a loud shout, which heard across the village.

- Ans
1. She gave
  2. loud shout
  3. which heard
  4. across the village

Question ID : 9895804105  
Chosen Option : 2

Q.7 Select the most appropriate word to fill in the blank.

The forest officers \_\_\_\_\_ a leopard cub trapped in a pit.

- Ans
1. discovered
  2. founded
  3. invented
  4. searched

Question ID : 9895804111  
Chosen Option : 1

Q.8

Select the most appropriate meaning of the given idiom.

Get out of hand

- Ans
1. Appreciable
  - ✓ 2. Uncontrollable
  3. Manageable
  - ✗ 4. Controllable

Question ID : 9895804125  
Chosen Option : 1

Q.9 Select the most appropriate synonym of the given word.

DUBIOUS

- Ans
- ✗ 1. Delicate
  - ✗ 2. Dutiful
  3. Duplicate
  - ✓ 4. Doubtful

Question ID : 9895804123  
Chosen Option : 4

Q.1 Select the most appropriate option to substitute the underlined segment in the given sentence. If there is no need to substitute it, select No improvement.

Rishi cleared the IIT entrance examination but do not pursue engineering due to personal reasons.

- Ans
1. did not pursue
  2. was not pursuing
  3. No improvement
  4. has not pursue

Question ID : 9895804109  
Chosen Option : 1

Q.1 Select the most appropriate antonym of the given word.

ORDINARY

- Ans
- ✓ 1. Unique
  - ✗ 2. Common
  - ✗ 3. Normal
  4. Regular

Question ID : 9895804121  
Chosen Option : 2

Q.1 Fill in the blanks with the most appropriate words.

They did it as you \_\_\_\_\_ them to.

- Ans
1. are telling
  - ✓ 2. had told

- 3. tell
- 4. will tell

Question ID : 9895804113  
Chosen Option : 4

Q.1  
3 Select the correctly spelt word.

- Ans
- 1. Playwright
  - 2. Playwrite
  - 3. Playwriter
  - 4. Playright

Question ID : 9895804130  
Chosen Option : 4

Q.1  
4 Select the most appropriate meaning of the given idiom.

To hold your horses

- Ans
- 1. To control horses
  - 2. To have patience
  - 3. To be too quick
  - 4. To be excited

Question ID : 9895804126  
Chosen Option : 1

Comprehension:

In the following passage some words have been deleted. Fill in the blanks with the help of the alternatives given.

Suppose you have to make a payment of Rs. 100, you can do so in coins; but it would be \_\_\_\_\_ (1) to pay in nickel or copper coins, because it takes much time to \_\_\_\_\_ (2) them. The government \_\_\_\_\_ (3) permits you to make the payment in \_\_\_\_\_ (4) What are these notes really? They are a kind of money although they are made of \_\_\_\_\_ (5) instead of metal.

SubQuestion No : 15

Q.1  
5 Fill in blank (1) with the most appropriate option.

- Ans
- 1. cumbersome
  - 2. feasible
  - 3. practical
  - 4. easy

Question ID : 9895804116  
Chosen Option : 4

Comprehension:

In the following passage some words have been deleted. Fill in the blanks with the help of the alternatives given.

Suppose you have to make a payment of Rs. 100, you can do so in coins; but it would be \_\_\_\_\_ (1) to pay in nickel or copper coins, because it takes much time to \_\_\_\_\_ (2) them. The government \_\_\_\_\_ (3) permits you to make the payment in \_\_\_\_\_ (4) What are these notes really? They are a kind of money although they are made of \_\_\_\_\_ (5) instead of metal.

SubQuestion No : 16

Q.1  
6 Fill in blank (2) with the most appropriate option.

- Ans
- 1. count
  - 2. pay
  - 3. hold
  - 4. carry

Question ID : 9895804117  
Chosen Option : 2

Comprehension:

In the following passage some words have been deleted. Fill in the blanks with the help of the alternatives given.

Suppose you have to make a payment of Rs. 100, you can do so in coins; but it would be \_\_\_\_\_ (1) to pay in nickel or copper coins, because it takes much time to \_\_\_\_\_ (2) them. The government \_\_\_\_\_ (3) permits you to make the payment in \_\_\_\_\_ (4) What are these notes really? They are a kind of money although they are made of \_\_\_\_\_ (5) instead of metal.

SubQuestion No : 17

Q.1  
7 Fill in blank (3) with the most appropriate option.

- Ans
- 1. although
  - 2. so
  - 3. then
  - 4. therefore

Question ID : 9895804118  
Chosen Option : 2

Comprehension:

In the following passage some words have been deleted. Fill in the blanks with the help of the alternatives given.

Suppose you have to make a payment of Rs. 100, you can do so in coins; but it would be \_\_\_\_\_ (1) to pay in nickel or copper coins, because it takes much time to \_\_\_\_\_ (2) them. The government \_\_\_\_\_ (3) permits you to make the payment in \_\_\_\_\_ (4) What are these notes really? They are a kind of money although they are made of \_\_\_\_\_ (5) instead of metal.

SubQuestion No : 18

Q.1

8 Fill in blank (4) with the most appropriate option.

- Ans  1. notes  
 2. coins  
 3. card  
 4. currency

Question ID : 9895804119  
Chosen Option : 1

**Comprehension:**

In the following passage some words have been deleted. Fill in the blanks with the help of the alternatives given.

Suppose you have to make a payment of Rs. 100, you can do so in coins; but it would be \_\_\_\_\_ (1) to pay in nickel or copper coins, because it takes much time to \_\_\_\_\_ (2) them. The government \_\_\_\_\_ (3) permits you to make the payment in \_\_\_\_\_ (4) What are these notes really? They are a kind of money although they are made of \_\_\_\_\_ (5) instead of metal.

**SubQuestion No : 19**

Q.1 9 Fill in blank (5) with the most appropriate option.

- Ans  1. paper  
 2. plastic  
 3. wood  
 4. cloth

Question ID : 9895804120  
Chosen Option : 1

Q.2 0 Select the most appropriate option to substitute the underlined segment in the given sentence. If there is no need to substitute it, select No improvement.

Don't talk as soon as she is dancing.

- Ans  1. how  
 2. as long as  
 3. but  
 4. No improvement

Question ID : 9895804108  
Chosen Option : 3

Q.2 1 Select the most appropriate option to substitute the underlined segment in the given sentence. If there is no need to substitute it, select No improvement.

India expressed concern at the arrest of 130 Indian students enrolling at a fake university in Detroit.

- Ans  1. enrolling in a fake university  
 2. No improvement  
 3. enrolled at a fake university  
 4. enroll by a fake university

Question ID : 9895804110  
Chosen Option : 3



Q.2  
2 Select the correctly spelt word.

- Ans
1. Succesfully
  2. Successfully
  3. Sucessfully
  4. Successfully

Question ID : 9895804129  
Chosen Option : 3

Q.2  
3 Identify the segment in the sentence which contains the grammatical error from the given options.

The work is too much for any man to do single-hand.

- Ans
1. too much
  2. The work is
  3. any man to
  4. single-hand

Question ID : 9895804107  
Chosen Option : 1

Q.2  
4 Select the most appropriate antonym of the given word.

VIGOROUS

- Ans
1. Feeble
  2. Curious
  3. Trivial
  4. Strong

Question ID : 9895804122  
Chosen Option : 2

Q.2  
5 Select the most appropriate word to fill in the blank.

I shall be glad if you \_\_\_\_\_ my proposal.

- Ans
1. except
  2. expect
  3. intercept
  4. accept

Question ID : 9895804112  
Chosen Option : 4

Section : Hindi Language

Q.1 निम्नलिखित में से उस विकल्प का चयन करें जो ' कोल्हू का बैल होना ' मुहावरे का अर्थ व्यक्त करता है।

- Ans
1. बैल के समान बुद्धि होना
  2. बैल से कोल्हू चलवाना

3. रात-दिन काम में लगे रहना
4. कोल्हू में बैल जोतना

Question ID : 9895803513  
Chosen Option : --

Q.2 रिक्त स्थान को भरने के लिए सबसे उपयुक्त शब्द का चयन करें।

कालिदास बहुत \_\_\_\_\_ कवि थे।

- Ans
1. रोगी
  2. बड़े
  3. छोटे
  4. मूर्ख

Question ID : 9895803501  
Chosen Option : --

Q.3 सही वर्तनी वाले शब्द का चयन करें।

- Ans
1. व्यावस्था
  2. वयवस्था
  3. व्यवस्था
  4. व्यवसथा

Question ID : 9895803517  
Chosen Option : --

Q.4 रिक्त स्थान को भरने के लिए सबसे उपयुक्त शब्द का चयन करें।

मछली \_\_\_\_\_ में तैरती है।

- Ans
1. तेल
  2. पानी
  3. बादल
  4. आकाश

Question ID : 9895803498  
Chosen Option : --

Q.5 रिक्त स्थान को भरने के लिए सबसे उपयुक्त शब्द का चयन करें।

मेरे प्रश्न का \_\_\_\_\_ कौन देगा ?

- Ans
1. उत्तर
  2. पुरस्कार
  3. शब्द
  4. फल

Question ID : 9895803499

Q.6 दिए गए वाक्य में रेखांकित खंड को प्रतिस्थापित करने के लिए सबसे उपयुक्त विकल्प का चयन करें।

एक सूखे कागज से हाथ में लेकर गोला बना लो।

Ans

1. कागज की हाथ को लेकर
2. कागज से हाथ से लेकर
3. कागज को हाथ से लेकर
4. कागज को हाथ में लेकर

Question ID : 9895803495

Chosen Option : --

Q.7 रिक्त स्थान को भरने के लिए सबसे उपयुक्त शब्द का चयन करें।

पुस्तक का \_\_\_\_\_ फट गया।

Ans

1. पन्ना
2. पद
3. शब्द
4. वाक्य

Question ID : 9895803500

Chosen Option : --

Q.8 दिये गये वाक्यांश के लिए एक शब्द दीजिये।

जो आँखों के सामने हो

Ans

1. प्रत्यक्ष
2. परोक्ष
3. विरोध
4. अक्षि

Question ID : 9895803514

Chosen Option : --

Q.9 दिए गए वाक्य में रेखांकित खंड को प्रतिस्थापित करने के लिए सबसे उपयुक्त विकल्प का चयन करें।

जब इच्छाएँ हमारी पर हावी हो जाती हैं तो हमारा मन सदा असंतुष्ट रहता है।

Ans

1. जब इच्छाएँ हमारों पर हावी हो जाती हैं
2. जब इच्छाएँ हम पर हावी हो जाती हैं
3. जब इच्छाएँ हम पर हावी हो जाते हैं
4. जब इच्छाएँ उन पर हावी हो जाती हैं

Question ID : 9895803497

Chosen Option : --

दिए गए अनुच्छेद में कुछ शब्द हटा दिए गए हैं। दिए गए विकल्पों की सहायता से रिक्त स्थान भरें। प्रत्येक संख्या के लिए सबसे उपयुक्त विकल्प का चयन करें।

संसार में बहुत सी वस्तुएँ बार-बार मिल सकती हैं। किंतु चार वस्तुएँ कभी \_\_\_\_\_(1) नहीं आतीं: मुँह से निकला \_\_\_\_\_(2), कमान से निकला तीर, खोया अवसर और बीता समय। सफलता का पहला मंत्र है - समय प्रबंधन। 'कल नहीं आज' यह \_\_\_\_\_(3) का परम मंत्र है। हमें जीवन के हर क्षेत्र में इसका \_\_\_\_\_(4) करना चाहिए। जो आज को सार्थक बनाता है, उसके भूत और भविष्य \_\_\_\_\_(5) हो जाते हैं।

SubQuestion No : 10

Q.1  
0 गद्यांश में संकेतित रिक्त स्थान (1) के लिए उपयुक्त शब्द होगा -

- Ans  1. उठकर  
 2. लौटकर  
 3. बनकर  
 4. मिलकर

Question ID : 9895803503  
Chosen Option : --

Comprehension:

दिए गए अनुच्छेद में कुछ शब्द हटा दिए गए हैं। दिए गए विकल्पों की सहायता से रिक्त स्थान भरें। प्रत्येक संख्या के लिए सबसे उपयुक्त विकल्प का चयन करें।

संसार में बहुत सी वस्तुएँ बार-बार मिल सकती हैं। किंतु चार वस्तुएँ कभी \_\_\_\_\_(1) नहीं आतीं: मुँह से निकला \_\_\_\_\_(2), कमान से निकला तीर, खोया अवसर और बीता समय। सफलता का पहला मंत्र है - समय प्रबंधन। 'कल नहीं आज' यह \_\_\_\_\_(3) का परम मंत्र है। हमें जीवन के हर क्षेत्र में इसका \_\_\_\_\_(4) करना चाहिए। जो आज को सार्थक बनाता है, उसके भूत और भविष्य \_\_\_\_\_(5) हो जाते हैं।

SubQuestion No : 11

Q.1  
1 गद्यांश में संकेतित रिक्त स्थान (2) के लिए उपयुक्त शब्द होगा -

- Ans  1. शब्द  
 2. कंठ  
 3. पानी  
 4. खाना

Question ID : 9895803504  
Chosen Option : --

Comprehension:

दिए गए अनुच्छेद में कुछ शब्द हटा दिए गए हैं। दिए गए विकल्पों की सहायता से रिक्त स्थान भरें। प्रत्येक संख्या के लिए सबसे उपयुक्त विकल्प का चयन करें।

संसार में बहुत सी वस्तुएँ बार-बार मिल सकती हैं। किंतु चार वस्तुएँ कभी \_\_\_\_\_(1) नहीं आतीं: मुँह से निकला \_\_\_\_\_(2), कमान से निकला तीर, खोया अवसर और बीता समय। सफलता का पहला मंत्र है - समय प्रबंधन। 'कल नहीं आज' यह \_\_\_\_\_(3) का परम मंत्र है। हमें जीवन के हर क्षेत्र में इसका \_\_\_\_\_(4) करना चाहिए। जो आज को सार्थक बनाता है, उसके भूत और भविष्य \_\_\_\_\_(5) हो जाते हैं।

SubQuestion No : 12

Q.1  
2 गद्यांश में संकेतित रिक्त स्थान (3) के लिए उपयुक्त शब्द होगा -

- Ans ✓ 1. असफलता  
2. निराशा  
✗ 3. हार  
✗ 4. सफलता

Question ID : 9895803505  
Chosen Option : --

Comprehension:

दिए गए अनुच्छेद में कुछ शब्द हटा दिए गए हैं। दिए गए विकल्पों की सहायता से रिक्त स्थान भरें। प्रत्येक संख्या के लिए सबसे उपयुक्त विकल्प का चयन करें।

संसार में बहुत सी वस्तुएँ बार-बार मिल सकती हैं। किंतु चार वस्तुएँ कभी \_\_\_\_\_(1) नहीं आतीं: मुँह से निकला \_\_\_\_\_(2), कमान से निकला तीर, खोया अवसर और बीता समय। सफलता का पहला मंत्र है - समय प्रबंधन। 'कल नहीं आज' यह \_\_\_\_\_(3) का परम मंत्र है। हमें जीवन के हर क्षेत्र में इसका \_\_\_\_\_(4) करना चाहिए। जो आज को सार्थक बनाता है, उसके भूत और भविष्य \_\_\_\_\_(5) हो जाते हैं।

SubQuestion No : 13

Q.1  
3 गद्यांश में संकेतित रिक्त स्थान (4) के लिए उपयुक्त शब्द होगा -

- Ans ✗ 1. उपहास  
2. परिष्कार  
3. अनुसरण  
4. तिरस्कार

Question ID : 9895803506  
Chosen Option : --

Comprehension:

दिए गए अनुच्छेद में कुछ शब्द हटा दिए गए हैं। दिए गए विकल्पों की सहायता से रिक्त स्थान भरें। प्रत्येक संख्या के लिए सबसे उपयुक्त विकल्प का चयन करें।

संसार में बहुत सी वस्तुएँ बार-बार मिल सकती हैं। किंतु चार वस्तुएँ कभी \_\_\_\_\_(1) नहीं आतीं: मुँह से निकला \_\_\_\_\_(2), कमान से निकला तीर, खोया अवसर और बीता समय। सफलता का पहला मंत्र है - समय प्रबंधन। 'कल नहीं आज' यह \_\_\_\_\_(3) का परम मंत्र है। हमें जीवन के हर क्षेत्र में इसका \_\_\_\_\_(4) करना चाहिए। जो आज को सार्थक बनाता है, उसके भूत और भविष्य \_\_\_\_\_(5) हो जाते हैं।

SubQuestion No : 14

Q.1  
4 गद्यांश में संकेतित रिक्त स्थान (5) के लिए उपयुक्त शब्द होगा -

- Ans  1. सफल  
 2. असफल  
 3. विफल  
 4. निष्फल

Question ID : 9895803507  
Chosen Option : --

Q.1  
5 सही वर्तनी वाले शब्द का चयन करें।

- Ans  1. उत्कृष्ट  
 2. उत्कृष्ट  
 3. उत्कृष्ठ  
 4. उत्कृश्ट

Question ID : 9895803516  
Chosen Option : --

Q.1  
6 दिए गए शब्द के पर्यायवाची शब्द का चयन करें।

कृपण

- Ans  1. कृपा  
 2. कृपाण  
 3. कंजूस  
 4. कृतज्ञ

Question ID : 9895803510  
Chosen Option : --

Q.1  
7 दिए गए शब्द का विलोम चुनें।

घृणा

Ans

1. ईर्ष्या
2. प्रेम
3. द्वेष
4. निंदा

Question ID : 9895803509  
Chosen Option : --

Q.1 निम्नलिखित में से उस विकल्प का चयन करें जो ' आँख खुलना ' मुहावरे का अर्थ व्यक्त करता है।

- Ans
1. वास्तविकता का बोध होना
  2. भ्रमित होना
  - ✗ 3. गलत काम करना
  4. अपनी आँखें खोलना

Question ID : 9895803512  
Chosen Option : --

Q.1 दिये गये वाक्यांश के लिए एक शब्द दीजिये।

जो कभी बूढ़ा न हो

- Ans
1. यौवन
  - ✗ 2. अमर
  - ✓ 3. अजर
  4. अमृत

Question ID : 9895803515  
Chosen Option : --

Q.2 दिए गए शब्द के पर्यायवाची शब्द का चयन करें।

किसलय

- Ans
1. पुस्तकालय
  2. भोजनालय
  3. विद्यालय
  - ✗ 4. नवपल्लव

Question ID : 9895803511  
Chosen Option : --

Q.2 दिए गए वाक्य का वह भाग ज्ञात करें जिसमें कोई त्रुटि है।

भाषण एक सामाजिक कला है जिसकी संबंध विभिन्न समस्याओं से होता है।

- Ans
1. भाषण एक सामाजिक कला है
  2. जिसकी संबंध
  - ✗ 3. विभिन्न समस्याओं से

4. होता है।

Question ID : 9895803493  
Chosen Option : --

Q.2 दिए गए वाक्य का वह भाग ज्ञात करें जिसमें कोई त्रुटि है।

इस सरकार का राज में आटे-दाल के दाम सातवें आसमान पर पहुँच गए हैं।

Ans

1. आटे-दाल के दाम
2. इस सरकार का राज में
3. पहुँच गए हैं।
4. सातवें आसमान पर

Question ID : 9895803492  
Chosen Option : --

Q.2 दिए गए वाक्य में रेखांकित खंड को प्रतिस्थापित करने के लिए सबसे उपयुक्त विकल्प का चयन करें।

गरीब व्यक्ति आशा और विश्वास पर सहारे रात बीतने की प्रतीक्षा करता है।

Ans

1. आशा और विश्वास के सहारे
2. आशा और विश्वास से सहारे
3. आशा और विश्वास पर सहारा
4. आशा और विश्वास का सहारा

Question ID : 9895803496  
Chosen Option : --

Q.2 दिए गए शब्द का विलोम चुनें।

उर्वर

Ans

- ✓ 1. पतन
- ✗ 2. ऊसर
- ✗ 3. पराया
4. घृणा

Question ID : 9895803508  
Chosen Option : --

Q.2 दिए गए वाक्य का वह भाग ज्ञात करें जिसमें कोई त्रुटि है।

वास्तव पर अकेलापन विधाता का एक अभिशाप है।

Ans

- ✓ 1. वास्तव पर
2. विधाता का
3. एक अभिशाप है।
4. अकेलापन





# Constable (GD) in CAPFs, NIA, SSF and Rifleman (GD) in Assam Rifles Examination, 2018

Roll No. :	
Registration No.	
Name :	
Exam Venue :	iON Digital Zone iDZ Kovilambakkam
Exam Time :	12:30 PM - 2:00 PM
Exam Date :	12/02/2019

Section : General Section

**Q.1** Choose the option in which the figure marked 'X' is embedded.



X

Ans



Question ID : 9895804688

Chosen Option : 2

**Q.2**

Select the option that is related to the third term in the same way as the second term is related to the first term.

CGK : XTP :: GIM : ?

1. TSN

2. TPN

3. TQN

4. TRN

Question ID : 9895804672

Chosen Option : 4

**Q.3**

J, K, L, M, N and O are six teachers. Each one teaches a different subject out of Hindi, English, Math, Science, Social Science and Arts, not necessarily in the same order. Each of them teaches on only one day, from Monday to Saturday, not necessarily in the same order. J teaches Arts on Saturday. L teaches neither English nor Social Science, but he teaches on Thursday. Wednesday is reserved for Maths taught by K. O teaches Science a day before N. Social Science is taught a day before Arts. Which subject is taught by L?

- Ans  1. Hindi  
 2. Maths  
 3. Science  
 4. Arts

Question ID : 9895804677  
Chosen Option : 3

Q.4 In a certain code, TOUCH is written as 68. How will ERROR be written in that code?

- Ans  1. 61  
 2. 54  
 3. 59  
 4. 55

Question ID : 9895804674  
Chosen Option : 2

Q.5 Which number will follow next in the given number series?

3, 18, 48, 93, ?

- Ans  1. 247  
 2. 147  
 3. 153  
 4. 202

Question ID : 9895804680  
Chosen Option : 1

Q.6 Seven friends O, P, Q, R, S, T and U are watching a movie sitting in a row. S is sitting at one extreme end. Q is sitting second to the right of S. P is sitting between O and Q. U is not sitting at any extreme end. R is sitting to the left of T. Who is sitting at the extreme right end?

- Ans  1. R  
 2. T  
 3. P  
 4. Q

Question ID : 9895804675  
Chosen Option : 3

Q.7 Select the option that is related to the third term in the same way as the second term is related to the first term.

Lamb : Frisk :: Mouse : ?

- Ans  1. Strut  
 2. Leap  
 3. Scamper  
 4. Swoop

Question ID : 9895804671  
Chosen Option : 2

Q.8 Which one of the following letter clusters does NOT belong to the group?

- Ans 1.

- 2. AK
- 3. CI
- 4. FH

Question ID : 9895804668  
Chosen Option : 2

**Q.9** The statements below are followed by two conclusions labeled I and II. Assuming that the information in the statements is true, even if it appears to be at variance with generally established facts, decide which conclusion(s) logically and definitely follow(s) from the information given in the statements.

**Statements:**

- 1) Some monks are convicts.
- 2) Some convicts are soldiers.

**Conclusion:**

- I. Some convicts are monks.
- II. Some soldiers are convicts.

- Ans**
- 1. Only conclusion II follows.
  - 2. Neither conclusion I nor conclusion II follows.
  - 3. Only conclusion I follows.
  - 4. Both conclusions follow.

Question ID : 9895804679  
Chosen Option : 2

**Q.1** A square transparent sheet with a pattern is given. How will the pattern appear when the transparent sheet is folded along the dotted line?



- Ans**
- 1.
  - 2.
  - 3.
  - 4.

Question ID : 9895804690  
Chosen Option : 2

**Q.1** Find out the two signs to be interchanged to make the following equation correct.

$$14 + 16 \times 14 - 7 \div 3 = 43$$

**Ans**

- 1. - and ÷
- 2. × and ÷
- 3. + and -
- 4. - and ×

Question ID : 9895804685  
Chosen Option : 4

Q.1 Select the option that will correctly replace the question mark (?) in the given pattern.

17	15	13
7	6	5
66	51	?

- Ans
- 1. 17
  - 2. 45
  - 3. 38
  - 4. 19

Question ID : 9895804684  
Chosen Option : 2

Q.1 Select the option that is related to the third number in the same way as the second number is related to the first number.

15 : 270 :: 13 : ?

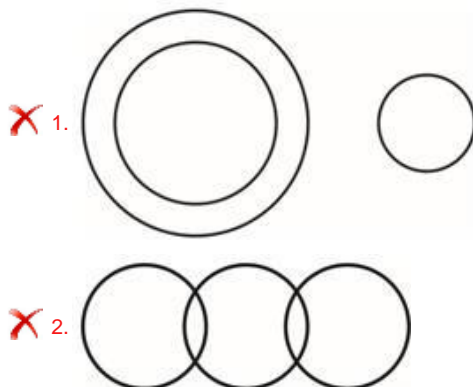
- Ans
- 1. 208
  - 2. 169
  - 3. 144
  - 4. 275


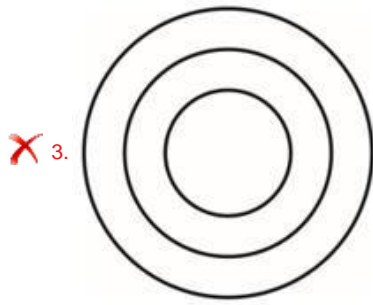
Question ID : 9895804682  
Chosen Option : 2

Q.1 Select the Venn diagram that best represents the given set of classes.

Austria, Denmark, Countries

Ans





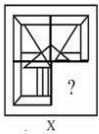
Question ID : 9895804691  
Chosen Option : 2

Q.1  
5 Choose the odd number out of the given options.

- Ans  1. 78  
 2. 91  
 3. 24  
 4. 65

Question ID : 9895804683  
Chosen Option : 3

Q.1  
6 Select a figure from amongst the four alternatives that when placed in the blank space (?) of figure X will complete the pattern. (Rotation is not allowed).

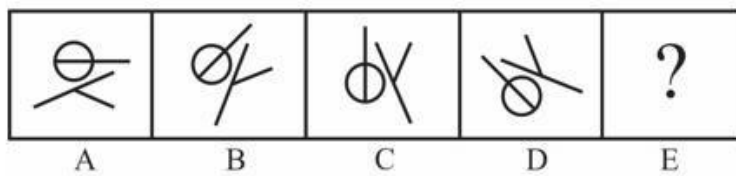


- Ans
- 1.
  - 2.
  - 3.
  - 4.


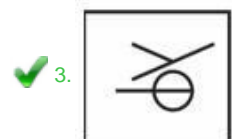
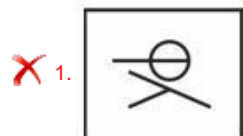
Question ID : 9895804687  
Chosen Option : 3

Q.1  
7

Choose the option that would follow next in the given figure series.



Ans



Question ID : 9895804686  
Chosen Option : 2

Q.1 Which number will follow next in the given number series?

7, 8, 16, 43, ?

- Ans  1. 109  
 2. 107  
 3. 113  
 4. 111

Question ID : 9895804681  
Chosen Option : 1

Q.1 Choose the option that most closely resembles the mirror image of the given word if mirror is placed at the right side.

9

RUPTURE

Ans



Question ID : 9895804689

Chosen Option : 4

Q.2  
0 In a certain code, ASSUME is written as EMUASS. How will NEEDLE be written in that code?

- Ans
- 1. ELDEEN
  - 2. EJDNEE
  - 3. EDLNEE
  - 4. ELDNEE

Question ID : 9895804673  
Chosen Option : 1

Q.2  
1 The statements below are followed by two conclusions labeled I and II. Assuming that the information in the statements is true, even if it appears to be at variance with generally established facts, decide which conclusion(s) logically and definitely follow(s) from the information given in the statements.

Statements:

- 1) All butterflies are reptiles.
- 2) All reptiles are mammals.

Conclusion:

- I. All mammals are butterflies.
- II. All butterflies are mammals.

- Ans
- 1. Both conclusions follow.
  - 2. Either conclusion I or conclusion II follows.
  - 3. Only conclusion II follows.
  - 4. Only conclusion I follows.

Question ID : 9895804678  
Chosen Option : 2

Q.2  
2 Choose the odd one out of the given options.

- Ans
- 1. Fox
  - 2. Tiger
  - 3. Crocodile
  - 4. Lion

Question ID : 9895804669  
Chosen Option : 3

Q.2  
3 Eight friends A, B, C, D, E, F, G and H are sitting around a circular table facing each other for a lunch. A is opposite F and third to the right of B. G is between F and D. H is to the left of D. E is between C and A. Who is sitting second to the left of C?

- Ans
- 1. D
  - 2. F
  - 3. B
  - 4. A

Question ID : 9895804676  
Chosen Option : 2

Q.2  
4



Select the correct option that will fill in the blank and complete the series.

MHW, KJU, ILS, GNQ, \_\_\_?

- Ans
- 1. EPQ
  - 2. EPO
  - 3. FPO
  - 4. EOP

Question ID : 9895804667  
Chosen Option : 3

Q.2 Select the option that is related to the third term in the same way as the second term is related to the first term.  
5

Iran : Rial : : Iraq : ?

- Ans
- 1. War
  - 2. Dirham
  - 3. Dinar
  - 4. Rial

Question ID : 9895804670  
Chosen Option : 3

Q.2 \_\_\_\_\_ is the outermost range of the Himalayas.  
6

- Ans
- 1. Himadri
  - 2. Pir Panjal
  - 3. Kailash
  - 4. Shivalik

Question ID : 9895802429  
Chosen Option : 2

Q.2 Which of the following is NOT a digital transaction in India?  
7

- Ans
- 1. Cash transaction
  - 2. Credit card transaction
  - 3. PayTM
  - 4. ATM transaction

Question ID : 9895802434  
Chosen Option : 2

Q.2 Who is called the "The iron man of India".  
8

- Ans
- 1. Vallabhai Patel
  - 2. M.K Gandhi
  - 3. Bal Gangadhar Tilak
  - 4. Jawaharlal Nehru

Question ID : 9895802424  
Chosen Option : 3

Q.2

9 \_\_\_\_\_ was an Indian film entry for 90<sup>th</sup> Oscar Award in 2018.

- Ans
- 1. Raazi
  - 2. Zero
  - 3. Newton
  - 4. Sanju

Question ID : 9895802442  
Chosen Option : 4

Q.3  
0 In a democracy, the ruling party is accountable to \_\_\_\_\_.

- Ans
- 1. the judiciary
  - 2. its leaders
  - 3. the opposition
  - 4. the people

Question ID : 9895802435  
Chosen Option : 4

Q.3  
1 The process by which similar genetically identical individuals can be produced is called \_\_\_\_\_.

- Ans
- 1. reproduction
  - 2. cloning
  - 3. scanning
  - 4. photosynthesis

Question ID : 9895802445  
Chosen Option : 1

Q.3  
2 Whose greatest achievement was the setting up of the Brahmo Samaj?

- Ans
- 1. B.R Ambedkar
  - 2. Aurobindo Gosh
  - 3. Raja Ram Mohan Roy
  - 4. Vivekanandha

Question ID : 9895802426  
Chosen Option : 3

Q.3  
3 Which of the following is NOT an amalgam?

- Ans
- 1. Solder
  - 2. Silver
  - 3. Bronze
  - 4. Brass

Question ID : 9895802448  
Chosen Option : 1

Q.3  
4 The resources obtained from biosphere and have life such as human beings, flora and fauna, fisheries, livestock etc. are called \_\_\_\_\_.

Ans

- 1. biotic resources
- 2. potential resources
- 3. abiotic resources
- 4. renewable resources

Question ID : 9895802430  
Chosen Option : 1

Q.3  
5 Rabi crops are sown in \_\_\_\_\_.

- Ans
- 1. April-May
  - 2. October-November
  - 3. May-June
  - 4. January-February

Question ID : 9895802432  
Chosen Option : 1

Q.3  
6 \_\_\_\_\_ aim(s) at creating self-employment opportunities in rural areas.

- Ans
- 1. The Rural Employment Generation Programme
  - 2. Anti-Poverty Programmes
  - 3. The Pradhan Mantri Ujjwala Yojana
  - 4. The Pradhan Mantri Gramodaya Yojana

Question ID : 9895802433  
Chosen Option : 3

Q.3  
7 The battle of Plassey was fought in the year \_\_\_\_\_.

- Ans
- 1. 1957
  - 2. 1900
  - 3. 1857
  - 4. 1757

Question ID : 9895802425  
Chosen Option : 1

Q.3  
8 Shankar's International Dolls Museum is situated in \_\_\_\_\_.

- Ans
- 1. Pune
  - 2. Kolkata
  - 3. Mumbai
  - 4. New Delhi

Question ID : 9895802438  
Chosen Option : 1

Q.3  
9 \_\_\_\_\_ discovered the solar system.

- Ans
- 1. Murphy
  - 2. Newton

3. Copernicus

4. Vasco Da Gama

Question ID : 9895802441  
Chosen Option : 1

Q.4  
0 \_\_\_\_\_ is/are responsible for water transportation in plants.

Ans 1. Chloroplast

2. Phloem

3. Veins

4. Xylem

Question ID : 9895802446  
Chosen Option : 4

Q.4  
1 \_\_\_\_\_ was the captain of the 1948 Indian national field hockey team that won the first gold in Olympics.

Ans 1. Akashdeep Singh

2. Sardar Singh

3. Kishan Lal

4. Manpreet Singh

Question ID : 9895802428  
Chosen Option : 4

Q.4  
2 The Chief of Election Commission is appointed by the \_\_\_\_\_.

Ans  1. Central Government

2. Central Government

3. Chief Justice of India

4. President of India

Question ID : 9895802436  
Chosen Option : 4

Q.4  
3 The book 'The Paradoxical Prime Minister' is written by \_\_\_\_\_.

Ans  1. Ashok Gehlot

2. Dr Man Mohan Singh

3. Jyotiraditya Scindia

4. Shashi Tharoor

Question ID : 9895802443  
Chosen Option : 2

Q.4  
4 What is NOT one of the main duties of the Election Commission?

Ans  1. Control and conduct elections

2. Supervise elections

3. Direct elections

4. Don't Conduct local elections

Question ID : 9895802437  
Chosen Option : 3

Q.4  
5 The famous shehnai player of India is \_\_\_\_\_.

- Ans
- 1. Bismillah Khan
  - 2. Ravi Shankar
  - 3. Latif Khan
  - 4. Hari Prasad

Question ID : 9895802439  
Chosen Option : 1

Q.4  
6 Which is NOT a part of the urinary system?

- Ans
- 1. Urinary bladder
  - 2. Ureter
  - 3. Bronchi
  - 4. Urethra

Question ID : 9895802447  
Chosen Option : 2

Q.4  
7 The Indian musician \_\_\_\_\_ has won an Academy Award.

- Ans
- 1. RD Barman
  - 2. AR Rahman
  - 3. Sonu Nigam
  - 4. Anu Malik

Question ID : 9895802440  
Chosen Option : 2

Q.4  
8 The \_\_\_\_\_ is the highest battlefield in the world.

- Ans
- 1. Gangotri Glacier
  - 2. Hari Parbat Glacier
  - 3. Nubra Glacier
  - 4. Siachin Glacier

Question ID : 9895802431  
Chosen Option : 4

Q.4  
9 \_\_\_\_\_ was the first Indian gymnast to win a gold medal at a global event.

- Ans
- 1. Hima Das
  - 2. Sakshi Malik
  - 3. Seema Punia
  - 4. Deepa Karmakar

Question ID : 9895802427  
Chosen Option : 3

Q.5  
0 Molecular formula of gold is \_\_\_\_\_.

- Ans  1. Au  
 2. Ag  
 3. G  
 4. Al

Question ID : 9895802444  
Chosen Option : 2

Q.5  
1 A car covers a certain distance at a speed of 48 km/hr in 14 hours. How much time it will take to cover the same distance at the speed of 84 km/hr?

- Ans  1. 6 hr  
 2. 8 hr  
 3. 9 hr  
 4. 12 hr

Question ID : 9895804301  
Chosen Option : 2

Q.5  
2 Marked price of an article is 60% more than its cost price. If the article is sold at a profit of 20%, then what will be the discount percentage?

- Ans  1. 37.5%  
 2. 17.5%  
 3. 15%  
 4. 25%

Question ID : 9895804289  
Chosen Option : 3

Q.5  
3 12 persons can complete half of a work in 9 days. How many persons can complete the same work (whole) in 6 days?

- Ans  1. 36  
 2. 45  
 3. 48  
 4. 42

Question ID : 9895804300  
Chosen Option : 3

Q.5  
4 If  $A$  is 20% less than  $B$ , then what will be the value of  $(2B - A)/A$ ?

- Ans  1.  $3/4$   
 2.  $3/2$   
 3.  $3/5$   
 4.  $4/3$

Question ID : 9895804291  
Chosen Option : 2

Q.5  
5 What is the value of  $10 - [6 - 4 - (2 \div 1 - 2)]$ ?

- Ans  1.

- 2. 12
- 3. 14
- 4. 8

Question ID : 9895804285  
Chosen Option : 4

Q.5  
6 What is the value of  $\left[22\frac{3}{4} \div \frac{14}{3} \text{ of } \left(8 - \frac{1}{5} + 4 - 2 \div \frac{1}{2}\right)\right]$ ?

- Ans
- 1.  $\frac{3}{7}$
  - 2.  $\frac{91}{213}$
  - 3.  $\frac{5}{8}$
  - 4.  $\frac{91}{199}$

Question ID : 9895804286  
Chosen Option : 4

Q.5  
7 After giving a discount of 25%, a shopkeeper earns 40% profit. Marked price is what percent more than the cost price?

- Ans
- 1. 80%
  - 2. 75%
  - 3. 86.67%
  - 4. 85%

Question ID : 9895804292  
Chosen Option : 3

Q.5  
8 Mohit starts moving from a place  $A$  and reaches the place  $B$  in 12 hours. He covers  $\frac{1}{5}$ th part of the total distance at the speed of 6 km/hr and covers the remaining distance at the speed of 8 km/hr. What is the distance between  $A$  and  $B$ ?

- Ans
- 1. 90 km
  - 2. 95 km
  - 3. 60 km
  - 4. 75 km

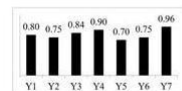
Question ID : 9895804302  
Chosen Option : 3

Q.5  
9 A sum of ₹ 4200 becomes ₹ 5082 in 3 years rate simple interest. What is the rate of interest per annum?

- Ans
- 1. 8%
  - 2. 9%
  - 3. 5%
  - 4. 7%

Question ID : 9895804297  
Chosen Option : 2

Q.6 The bar chart given below shows the ratio of expenditure to revenue for seven consecutive years  $Y_1, Y_2, Y_3, Y_4, Y_5, Y_6$  and  $Y_7$ .



The profit percentage is lowest for which year?

Ans

- 1. Y4
- 2. Y7
- 3. Cannot be determined
- 4. Y3

Question ID : 9895804306  
Chosen Option : 3

Q.6  
1 The compound interest on a sum for 4<sup>th</sup> year is ₹6000 and compound interest for 5<sup>th</sup> year is ₹ 6750 (interest is compounded annually). What is the rate of interest?

- Ans
- 1. 25%
  - 2. 20%
  - 3. 12.5%
  - 4. 15%

Question ID : 9895804298  
Chosen Option : 2

Q.6  
2 What will be the ratio of Highest common Factor and Least Common Multiple of two numbers 16 and 20?

- Ans
- 1. 1 : 25
  - 2. 4 : 63
  - 3. 1 : 20
  - 4. 1 : 10

Question ID : 9895804284  
Chosen Option : 3

Q.6  
3 The sides of a triangle are in the ratio 4 : 3 : 2. If the perimeter of the triangle is 63 cm, then what will be the length of the largest side?

- Ans
- 1. 28 cm
  - 2. 35 cm
  - 3. 21 cm
  - 4. 42 cm

Question ID : 9895804295  
Chosen Option : 4

Q.6  
4 A and C together can complete a work in 120 days, C and E together can complete the same work in 80 days and A and E together can complete the same work in 160 days. In how many days A, C and E together can complete the same work?

- Ans
- 1. 120/13 days
  - 2. 480/13 days
  - 3. 240/13 days
  - 4. 960/13 days

Question ID : 9895804299  
Chosen Option : 2

Q.6  
5 Ramesh purchases 75 articles for ₹ 10800 and sells them at a loss equal to the selling price of 5 articles. What will be the selling price of one article?

- Ans
- 1. ₹ 156
  - 2. ₹ 135



3. ₹ 144

4. ₹ 132

Question ID : 9895804293  
Chosen Option : 3

Q.6 The length, breadth and height of room is 16 metres, 12 metres and 15 metres. What will be the length of the largest rod  
6 that can be placed in that room?

Ans  1. 20 metres

2. 18 metres

3. 25 metres

4. 24 metres

Question ID : 9895804304  
Chosen Option : 3

Q.6 The volume of a right circular cone is  $2464 \text{ cm}^3$ . If the height of cone is 12 cm, then what will be the radius of its base?  
7

Ans  1. 12 cm

2. 8 cm

3. 14 cm

4. 10 cm

Question ID : 9895804303  
Chosen Option : 3

Q.6 The volume of a right circular cone is  $1232 \text{ cm}^3$ . If the height of cone is 24 cm, then what will be the radius of its base?  
8

Ans  1. 9 cm

2. 7 cm

3. 8 cm

4. 5 cm

Question ID : 9895804305  
Chosen Option : 3

Q.6 If a 12 years old boy is replaced by a new boy, then the average age of 18 boys increases by 1.5 years. What is the age  
9 of the new boy?

Ans  1. 35 years

2. 37.5 years

3. 43 years

4. 39 years

Question ID : 9895804287  
Chosen Option : 2

Q.7 The average of 8 numbers is 44. If a constant 'Y' is added to each number, then average becomes 47. What is the value  
0 of 'Y'?

Ans  1. 21

2. 3

3. 8

4. 24

Question ID : 9895804288

Q.7  
1 If  $X : Y = 7 : 5$  and  $Y : Z = 7 : 11$ , then what is the ratio of  $X : Y : Z$ ?

- Ans
- 1. 30 : 35 : 49
  - 2. 49 : 35 : 55
  - 3. 7 : 5 : 11
  - 4. 49 : 30 : 55

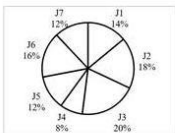
Question ID : 9895804294  
Chosen Option : 3

Q.7  
2 If  $P : Q = 5 : 6$  and  $R : Q = 25 : 9$ , then what is the ratio of  $P : R$ ?

- Ans
- 1. 10 : 13
  - 2. 10 : 3
  - 3. 3 : 10
  - 4. 13 : 10

Question ID : 9895804296  
Chosen Option : 2

Q.7  
3 The pie chart given below shows the time taken in 7 different procedures J1, J2, J3, J4, J5, J6 and J7 in making a car as a percentage of total time taken. The total time taken in making one car is 1200 hours.



What is the difference between the time taken in processes J1 and J4?

- Ans
- 1. 96 hours
  - 2. 72 hours
  - 3. 60 hours
  - 4. 84 hours

Question ID : 9895804308  
Chosen Option : 1

Q.7  
4 The data given below shows the number of people who have saved a certain amount of money.

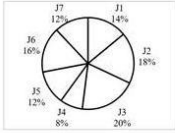
Savings (in ₹)	Number of people
5	1
15	3
20	4
25	2
30	1
35	1
40	2

What is the mean saving per person?

- Ans  1. ₹ 28.89  
 2. ₹ 21.57  
 3. ₹ 23.21  
 4. ₹ 25.54

Question ID : 9895804290  
Chosen Option : 3

Q.7 The pie chart given below shows the time taken in 7 different procedures J1, J2, J3, J4, J5, J6 and J7 in making a car as a percentage of total time taken. The total time taken in making one car is 1200 hours.



What will be the total time taken in procedures J2 and J5?

- Ans  1. 396 hours  
 2. 240 hours  
 3. 312 hours  
 4. 360 hours

Question ID : 9895804307  
Chosen Option : 3

Section : English Language

Q.1 Select the most appropriate word to fill in the blank.

The telephone was \_\_\_\_\_ by Alexander Graham Bell.

- Ans  1. discovered  
 2. invented  
 3. researched  
 4. found

Question ID : 9895804164  
Chosen Option : 2

Q.2 Select the correctly spelt word.

- Ans  1. Acommodate  
 2. Accomodate  
 3. Akommodate  
 4. Accommodate

Question ID : 9895804181  
Chosen Option : 4

Q.3 Select the option that means the same as the given idiom.

Like a cakewalk

- Ans  1. Not too easy  
 2. Quite difficult

3. Extremely difficult
4. Extremely easy

Question ID : 9895804177  
Chosen Option : 4

Q.4 From the given options, identify the segment in the sentence which contains the grammatical error.

On the eleventh hour, she retired from the contest, leaving the field open to her opponent.

- Ans
1. retired from
  2. to her opponent
  3. On the eleventh hour
  4. leaving the field

Question ID : 9895804156  
Chosen Option : 3

Q.5 Select the option that means the same as the given idiom.

To be under the weather

- Ans
1. To feel very cold
  2. To not feel well
  3. To feel very hot
  4. To get very wet

Question ID : 9895804176  
Chosen Option : 4

Q.6 Select the correctly spelt word.

- Ans
1. Hanckerchief
  2. Hangerchief
  3. Hankerchief
  4. Handkerchief

Question ID : 9895804180  
Chosen Option : 4

Q.7 Select the antonym of the given word.

SAVAGE

- Ans
1. Civilized
  2. Tribal
  3. Rustic
  4. Stern

Question ID : 9895804172  
Chosen Option : 1

Q.8

Select the most appropriate word to fill in the blank.

This question will be discussed at the meeting \_\_\_\_\_.

- Ans
- 1. yesterday
  - 2. tomorrow
  - 3. last year
  - 4. last week

Question ID : 9895804165  
Chosen Option : 4

Q.9 Select the most appropriate option to substitute the underlined segment in the given sentence. If there is no need to substitute it, select No Improvement.

A city court ordered the immediate release of a professor described his arrest as illegal.

- Ans
- 1. describing his arrest
  - 2. No improvement
  - 3. describing their arrest
  - 4. describing an arrest

Question ID : 9895804160  
Chosen Option : 3

Q.1 Select the most appropriate option to substitute the underlined segment in the given sentence. If there is no need to substitute it, select No Improvement.

Australia recorded its hot month in January with sweltering conditions expected to persist through April.

- Ans
- 1. its hotter month
  - 2. its hottest month
  - 3. No improvement
  - 4. its more hotter month

Question ID : 9895804159  
Chosen Option : 2

Q.1 From the given options, identify the segment in the sentence which contains the grammatical error.

A woman's real character will always be more visible in his household than anywhere else.

- Ans
- 1. real character
  - 2. than anywhere else
  - 3. in his household
  - 4. will always be

Question ID : 9895804157  
Chosen Option : 2

Comprehension:

In the following passage some words have been deleted. Fill in the blanks with the help of the alternatives given.

I have just \_\_\_\_\_ (1) that it is your birthday on Saturday and so I send you my best wishes. I hope the day itself will be \_\_\_\_\_ (2) and happy for you. May you be showered \_\_\_\_\_ (3) health and happiness for all the years to come. I take this opportunity of \_\_\_\_\_ (4) you from the bottom of my heart for all you have done for \_\_\_\_\_ (5).

SubQuestion No : 12

Q.1  
2 Select the most appropriate option that will fill in the blank number 1.

- Ans
- 1. remembered
  - 2. remember
  - 3. remembering
  - 4. remembers

Question ID : 9895804167  
Chosen Option : 2

Comprehension:

In the following passage some words have been deleted. Fill in the blanks with the help of the alternatives given.

I have just \_\_\_\_\_ (1) that it is your birthday on Saturday and so I send you my best wishes. I hope the day itself will be \_\_\_\_\_ (2) and happy for you. May you be showered \_\_\_\_\_ (3) health and happiness for all the years to come. I take this opportunity of \_\_\_\_\_ (4) you from the bottom of my heart for all you have done for \_\_\_\_\_ (5).

SubQuestion No : 13

Q.1  
3 Select the most appropriate option that will fill in the blank number 2.

- Ans
- 1. suitable
  - 2. excited
  - 3. plentiful
  - 4. peaceful

Question ID : 9895804168  
Chosen Option : 2

Comprehension:

In the following passage some words have been deleted. Fill in the blanks with the help of the alternatives given.

I have just \_\_\_\_\_ (1) that it is your birthday on Saturday and so I send you my best wishes. I hope the day itself will be \_\_\_\_\_ (2) and happy for you. May you be showered \_\_\_\_\_ (3) health and happiness for all the years to come. I take this opportunity of \_\_\_\_\_ (4) you from the bottom of my heart for all you have done for \_\_\_\_\_ (5).

SubQuestion No : 14

Q.1  
4 Select the most appropriate option that will fill in the blank number 3.

- Ans
- 1. by
  - 2. with
  - 3. from
  - 4. of

Question ID : 9895804169  
Chosen Option : 3

Comprehension:

In the following passage some words have been deleted. Fill in the blanks with the help of the alternatives given.

I have just \_\_\_\_\_ (1) that it is your birthday on Saturday and so I send you my best wishes. I hope the day itself will be \_\_\_\_\_ (2) and happy for you. May you be showered \_\_\_\_\_ (3) health and happiness for all the years to come. I take this opportunity of \_\_\_\_\_ (4) you from the bottom of my heart for all you have done for \_\_\_\_\_ (5).

SubQuestion No : 15

Q.1  
5 Select the most appropriate option that will fill in the blank number 4.

- Ans
- 1. greeting
  - 2. thanking
  - 3. congratulating
  - 4. wishing

Question ID : 9895804170  
Chosen Option : 2

Comprehension:

In the following passage some words have been deleted. Fill in the blanks with the help of the alternatives given.

I have just \_\_\_\_\_ (1) that it is your birthday on Saturday and so I send you my best wishes. I hope the day itself will be \_\_\_\_\_ (2) and happy for you. May you be showered \_\_\_\_\_ (3) health and happiness for all the years to come. I take this opportunity of \_\_\_\_\_ (4) you from the bottom of my heart for all you have done for \_\_\_\_\_ (5).

SubQuestion No : 16

Q.1  
6 Select the most appropriate option that will fill in the blank number 5.

- Ans
- 1. me
  - 2. them
  - 3. him
  - 4. her

Question ID : 9895804171  
Chosen Option : 3

Q.1  
7 From the given options, identify the segment in the sentence which contains the grammatical error.

A great fortune in the hands of a fool are a great misfortune.

- Ans
- 1. A great fortune
  - 2. of a fool
  - 3. in the hands
  - 4. are a great

Question ID : 9895804158  
Chosen Option : 3

Q.1  
8 Select the most appropriate option to substitute the underlined segment in the given sentence. If there is no need to substitute it, select No Improvement.

As you make your way in the interior of Red Fort, lush green gardens greet you.

- Ans
- 1. into the interior of
  - 2. No improvement
  - 3. along the interior of
  - 4. on the interior of

Question ID : 9895804161  
Chosen Option : 3

Q.1  
9 Select the most appropriate word to fill in the blank.

The flight of birds \_\_\_\_\_ a pretty sight to watch.

- Ans
- 1. have
  - 2. are
  - 3. is
  - 4. has



Q.2  
0 Select the word which means the same as the group of words given.

One who repairs leaking water pipes.

- Ans
- 1. Blacksmith
  - 2. Carpenter
  - 3. Mason
  - 4. Plumber

Q.2  
1 Select the synonym of the given word

EVERLASTING

- Ans
- 1. Equal
  - 2. Eternal
  - 3. Especial
  - 4. Essential

Q.2  
2 Select the word which means the same as the group of words given.

One who treats skin diseases

- Ans
- 1. Cardiologist
  - 2. Dermatologist
  - 3. Radiologist
  - 4. Gynecologist

Q.2  
3 Select the antonym of the given word.

COMPULSORY

- Ans
- 1. Optional
  - 2. Essential
  - 3. Important
  - 4. Choice

Q.2  
4

Select the synonym of the given word.

FANATIC

- Ans  1. Enthusiast  
 2. Fantastic  
 3. Famed  
 4. Great

Question ID : 9895804174  
Chosen Option : 4

Q.2 Select the most appropriate word to fill in the blank.

Mother cuts vegetables \_\_\_\_\_ a knife.

- Ans  1. by  
 2. from  
 3. with  
 4. off

Question ID : 9895804162  
Chosen Option : 3

Section : Hindi Language

Q.1 रिक्त स्थान को भरने के लिए सबसे उपयुक्त शब्द का चयन करें।

ज्योति ने एक \_\_\_\_\_ गीत सुनाया।

- Ans  1. नमकीन  
 2. खट्टा  
 3. मधुर  
 4. ठंडा

Question ID : 9895803527  
Chosen Option : --

Q.2 दिए गए शब्द का विलोम चुनें।

स्तुति

- Ans  1. याद  
 2. अपकार  
 3. प्रशंसा  
 4. निंदा

Question ID : 9895803535  
Chosen Option : --

Q.3

दिए गए वाक्य का वह भाग ज्ञात करें जिसमें कोई त्रुटि है।

समाज में रहकर शक्तिशाली लोगों से बैर जाना ठीक नहीं होता।

Ans

1. ठीक नहीं होता।
2. समाज में रहकर
3. शक्तिशाली लोगों से
4. बैर जाना

Question ID : 9895803518  
Chosen Option : --

Q.4 रिक्त स्थान को भरने के लिए सबसे उपयुक्त शब्द का चयन करें।

अंग का \_\_\_\_\_ है हिस्सा।

Ans

1. वचन
2. लिंग
3. विलोम
4. अर्थ

Question ID : 9895803525  
Chosen Option : --

Q.5 रिक्त स्थान को भरने के लिए सबसे उपयुक्त शब्द का चयन करें।

मेज के \_\_\_\_\_ बिल्ली बैठी है।

Ans

1. बाहर
2. नीचे
3. भीतर
4. साथ

Question ID : 9895803526  
Chosen Option : --

Q.6 दिए गए वाक्य में रेखांकित खंड को प्रतिस्थापित करने के लिए सबसे उपयुक्त विकल्प का चयन करें।

किसी वस्तु को तब तक नहीं फेंका जाता अब तक उसकी आवश्यकता बनी रहती है।

Ans

1. कब तक उसकी आवश्यकता
2. जब तक उसका आवश्यकता
3. तब तक उसकी आवश्यकता
4. जब तक उसकी आवश्यकता

Question ID : 9895803523  
Chosen Option : --

Q.7

रिक्त स्थान को भरने के लिए सबसे उपयुक्त शब्द का चयन करें।

\_\_\_\_\_ लड़का बहुत चालाक है।

- Ans
- 1. उस
  - 2. आप
  - 3. हम
  - 4. वह

Question ID : 9895803524  
Chosen Option : --

Q.8 दिये गये वाक्यांश के लिए एक शब्द चुनिए।

मांस खाने वाला

- Ans
- 1. सर्वहारी
  - 2. शाकाहारी
  - 3. मांसाहारी
  - 4. अल्पाहारी

Question ID : 9895803540  
Chosen Option : --

Q.9 सही वर्तनी वाले शब्द का चयन करें।

- Ans
- 1. आलपायु
  - 2. अल्पायु
  - 3. अलपायु
  - 4. अल्पायू

Question ID : 9895803543  
Chosen Option : --

Q.10 दिए गए शब्द के पर्यायवाची शब्द का चयन करें।

विभूति

- Ans
- 1. ऐश्वर्य
  - 2. अनुभूति
  - 3. सुंदरता
  - 4. प्रतिभूति

Question ID : 9895803536  
Chosen Option : --

Q.11 दिए गए वाक्य में रेखांकित खंड को प्रतिस्थापित करने के लिए सबसे उपयुक्त विकल्प का चयन करें।

मुझे अभी अपना गृह कार्य पूरा करने है, नहीं तो गुरु जी से डाँट पड़ेगी।

Ans

- ✓ 1. गृहकार्य में पूरे करने हैं
2. गृहकार्य पूरे करना है
3. गृहकार्य पूरी करने हैं
4. गृहकार्य पूरा करना है

Question ID : 9895803522

Chosen Option : --

Q.1 दिए गए वाक्य का वह भाग जात करें जिसमें कोई त्रुटि है। मनुष्य की सफलता का रहस्य परिश्रम एवं अभ्यास ही है  
2 और अभ्यास करके वह सफलता को प्राप्त पा लेता है।

Ans

1. परिश्रम एवं अभ्यास ही है
2. और अभ्यास करके वह
3. मनुष्य की सफलता का रहस्य
4. सफलता को प्राप्त पा लेता है।

Question ID : 9895803520

Chosen Option : --

Q.1 दिए गए वाक्य में रेखांकित खंड को प्रतिस्थापित करने के लिए सबसे उपयुक्त विकल्प का चयन करें।

अर्जुन ने धनुष से मछली का आँख पर निशाना लगाया।

Ans

- ✗ 1. मछली से धनुष की आँख पर
2. धनुष से मछली के आँख पर
3. धनुष से मछली की आँख पर
4. धनुष से मछली को आँख पर

Question ID : 9895803521

Chosen Option : --

Q.1 निम्नलिखित में से उस विकल्प का चयन करें जो ' उल्लू बनाना ' मुहावरे का अर्थ व्यक्त करता है।

Ans

1. बड़ाई करना
2. रात को जगाना
3. मूर्ख बनाना
4. उल्लू की तरह जागना

Question ID : 9895803538

Chosen Option : --

Comprehension:

दिए गए अनुच्छेद में कुछ शब्द हटा दिए गए हैं। दिए गए विकल्पों की सहायता से रिक्त स्थान भरें। प्रत्येक संख्या के लिए सबसे उपयुक्त विकल्प का चयन करें।

संसार में संपूर्ण अज्ञान नाम की वस्तु नहीं होती। अज्ञान अक्सर परिस्थितियों के \_\_\_\_\_ (1) बदलता रहता है। इसकी कोई एक सर्वमान्य \_\_\_\_\_ (2) नहीं हो सकती पर इतना तो तय है कि जिस समय यह व्यक्ति के \_\_\_\_\_ (3) पर हावी होता है, उस समय उसे यही लगता है कि वह \_\_\_\_\_ (4) का सबसे बड़ा जानी है और उसके पास हर एक वस्तु की मान्यता का \_\_\_\_\_ (5) है।

SubQuestion No : 15

Q.1  
5 गद्यांश में संकेतित रिक्त स्थान (1) के लिए उपयुक्त शब्द होगा

- Ans
1. गुना
  2. अज्ञान
  3. अनुसार
  4. गणित

Question ID : 9895803529  
Chosen Option : --

Comprehension:

दिए गए अनुच्छेद में कुछ शब्द हटा दिए गए हैं। दिए गए विकल्पों की सहायता से रिक्त स्थान भरें। प्रत्येक संख्या के लिए सबसे उपयुक्त विकल्प का चयन करें।

संसार में संपूर्ण अज्ञान नाम की वस्तु नहीं होती। अज्ञान अक्सर परिस्थितियों के \_\_\_\_\_ (1) बदलता रहता है। इसकी कोई एक सर्वमान्य \_\_\_\_\_ (2) नहीं हो सकती पर इतना तो तय है कि जिस समय यह व्यक्ति के \_\_\_\_\_ (3) पर हावी होता है, उस समय उसे यही लगता है कि वह \_\_\_\_\_ (4) का सबसे बड़ा जानी है और उसके पास हर एक वस्तु की मान्यता का \_\_\_\_\_ (5) है।

SubQuestion No : 16

Q.1  
6 गद्यांश में संकेतित रिक्त स्थान (2) के लिए उपयुक्त शब्द होगा

- Ans
1. ऊँचाई
  2. छाँव
  3. जिंदगी
  4. परिभाषा

Question ID : 9895803530  
Chosen Option : --

Comprehension:

दिए गए अनुच्छेद में कुछ शब्द हटा दिए गए हैं। दिए गए विकल्पों की सहायता से रिक्त स्थान भरें। प्रत्येक संख्या के लिए सबसे उपयुक्त विकल्प का चयन करें।

संसार में संपूर्ण अज्ञान नाम की वस्तु नहीं होती। अज्ञान अक्सर परिस्थितियों के \_\_\_\_\_ (1) बदलता रहता है। इसकी कोई एक सर्वमान्य \_\_\_\_\_ (2) नहीं हो सकती पर इतना तो तय है कि जिस समय यह व्यक्ति के \_\_\_\_\_ (3) पर हावी होता है, उस समय उसे यही लगता है कि वह \_\_\_\_\_ (4) का सबसे बड़ा ज्ञानी है और उसके पास हर एक वस्तु की मान्यता का \_\_\_\_\_ (5) है।

SubQuestion No : 17

Q.1  
7 गद्यांश में संकेतित रिक्त स्थान (3) के लिए उपयुक्त शब्द होगा

- Ans
1. दिमाग
  2. बादल
  3. नाक
  4. निर्णय

Question ID : 9895803531  
Chosen Option : --

Comprehension:

दिए गए अनुच्छेद में कुछ शब्द हटा दिए गए हैं। दिए गए विकल्पों की सहायता से रिक्त स्थान भरें। प्रत्येक संख्या के लिए सबसे उपयुक्त विकल्प का चयन करें।

संसार में संपूर्ण अज्ञान नाम की वस्तु नहीं होती। अज्ञान अक्सर परिस्थितियों के \_\_\_\_\_ (1) बदलता रहता है। इसकी कोई एक सर्वमान्य \_\_\_\_\_ (2) नहीं हो सकती पर इतना तो तय है कि जिस समय यह व्यक्ति के \_\_\_\_\_ (3) पर हावी होता है, उस समय उसे यही लगता है कि वह \_\_\_\_\_ (4) का सबसे बड़ा ज्ञानी है और उसके पास हर एक वस्तु की मान्यता का \_\_\_\_\_ (5) है।

SubQuestion No : 18

Q.1  
8 गद्यांश में संकेतित रिक्त स्थान (4) के लिए उपयुक्त शब्द होगा

- Ans
1. संसार
  2. पहाड़
  3. कल
  4. निर्णय

Question ID : 9895803532  
Chosen Option : --

Comprehension:

दिए गए अनुच्छेद में कुछ शब्द हटा दिए गए हैं। दिए गए विकल्पों की सहायता से रिक्त स्थान भरें। प्रत्येक संख्या के लिए सबसे उपयुक्त विकल्प का चयन करें।

संसार में संपूर्ण अज्ञान नाम की वस्तु नहीं होती। अज्ञान अक्सर परिस्थितियों के \_\_\_\_\_ (1) बदलता रहता है। इसकी कोई एक सर्वमान्य \_\_\_\_\_ (2) नहीं हो सकती पर इतना तो तय है कि जिस समय यह व्यक्ति के \_\_\_\_\_ (3) पर हावी होता है, उस समय उसे यही लगता है कि वह \_\_\_\_\_ (4) का सबसे बड़ा जानी है और उसके पास हर एक वस्तु की मान्यता का \_\_\_\_\_ (5) है।

SubQuestion No : 19

Q.1  
9 गद्यांश में संकेतित रिक्त स्थान (5) के लिए उपयुक्त शब्द होगा

- Ans
1. शर्त
  2. बदलाव
  3. जल
  4. तर्क

Question ID : 9895803533  
Chosen Option : --

Q.2  
0 दिए गए शब्द का विलोम चुनें।

उत्कृष्ट

- Ans
1. कृष्ण
  2. कष्ट
  3. निकृष्ट
  4. संकरी

Question ID : 9895803534  
Chosen Option : --

Q.2  
1 सही वर्तनी वाले शब्द का चयन करें।

- Ans
1. जनमंध
  2. जन्मांध
  3. जनमाध
  4. जन्मांद

Question ID : 9895803542  
Chosen Option : --

Q.2  
2 निम्नलिखित में से उस विकल्प का चयन करें जो ' एक आँख न भाना ' मुहावरे का अर्थ व्यक्त करता है।

- Ans
1. काना होना
  2. एक आँख से देखना



3. बहुत अच्छा लगना
4. जरा भी अच्छा न लगना

Question ID : 9895803539  
Chosen Option : --

Q.2  
3 दिए गए शब्द के पर्यायवाची शब्द का चयन करें।

पुलिन

Ans

1. प्राचीन
2. नवीन
3. कगार
4. कुलीन

Question ID : 9895803537  
Chosen Option : --

Q.2  
4 दिये गये वाक्यांश के लिए एक शब्द चुनिए।

जो भूमि उपजाऊ न हो

Ans

1. बंजर
2. मैदान
3. उर्वर
4. दलदल

Question ID : 9895803541  
Chosen Option : --

Q.2  
5 दिए गए वाक्य का वह भाग ज्ञात करें जिसमें कोई त्रुटि है। सभी महिलाएँ तुम्हारी तरह हिम्मत वाला होती तो गुंडागर्दी की घटनाओं में वृद्धि न होती।

Ans

1. वृद्धि न होती।
2. हिम्मत वाला होती तो
3. सभी महिलाएँ तुम्हारी तरह
4. गुंडागर्दी की घटनाओं में

Question ID : 9895803519  
Chosen Option : --

# Constable (GD) in CAPFs, NIA, SSF and Rifleman (GD) in Assam Rifles Examination, 2018

Roll No. :	
Registration No.	
Name :	
Exam Venue :	
Exam Time :	4:00 PM - 5:30 PM
Exam Date :	12/02/2019

## Section : General Section

**Q.1** Select the option that is related to the third term in the same way as the second term is related to the first term.

Myanmar : Kyat :: Pakistan : ?

- Ans
- 1. Dirham
  - 2. Rial
  - 3. Rupee
  - 4. Dinar

Question ID : 9895804695  
Chosen Option : 3

**Q.2** Select the option that is related to the third number in the same way as the second number is related to the first number.

22 : 625 :: 13 : ?

- Ans
- 1. 221
  - 2. 169
  - 3. 256
  - 4. 144

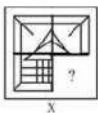
Question ID : 9895804707  
Chosen Option : 3

**Q.3** Eight friends A, B, C, D, E, F, G and H are sitting around a circular table facing each other for a lunch. A is opposite F and third to the right of B. G is between F and D. H is to the left of D. E is between C and A. Who is sitting third to the right of C?

- Ans
- 1. G
  - 2. A
  - 3. H
  - 4. D

Question ID : 9895804701  
Chosen Option : 3

**Q.4** Select a figure from amongst the four alternatives that when placed in the blank space (?) of figure X will complete the pattern. (Rotation is NOT allowed).



Ans



Question ID : 9895804712  
Chosen Option : 4

Q.5 Select the correct option that will fill in the blank and complete the series.

NIX, LKV, JMT, HOR, \_\_\_\_

- Ans
1. FQQ
2. FOP
3. FQO
4. FQP

Question ID : 9895804692  
Chosen Option : 4

Q.6 A square transparent sheet with a pattern is given. How will the pattern appear when the transparent sheet is folded along the dotted line?



- Ans
- 1.
- 2.
- 3.
- 4.

Question ID : 9895804715  
Chosen Option : 4

Q.7

Which number will follow next in the given number series?

8, 9, 17, 44, ?

- Ans
- 1. 105
  - 2. 100
  - 3. 108
  - 4. 103

Question ID : 9895804706  
Chosen Option : 3

Q.8 Choose the odd number out of the given options.

- Ans
- 1. 718
  - 2. 415
  - 3. 545
  - 4. 314

Question ID : 9895804708  
Chosen Option : 3

Q.9 Select the option that is related to the third term in the same way as the second term is related to the first term.

Larva : Insect :: Lamb : ?

- Ans
- 1. Deer
  - 2. Child
  - 3. Lion
  - 4. Sheep

Question ID : 9895804696  
Chosen Option : 4

Q.1 The statements below are followed by two conclusions labeled I and II. Assuming that the information in the statements is true, even if it appears to be at variance with generally established facts, decide which conclusion(s) logically and definitely follow(s) from the information given in the statements.

Statements:

- 1.) All pupils are crows.
- 2.) All cats are crows.

Conclusion

- I. Some cats are pupils.
- II. No cat is pupil.

- Ans
- 1. Both conclusions follow.
  - 2. Only conclusion I follows.
  - 3. Either conclusion I or conclusion II follows.
  - 4. Only conclusion II follows.

Question ID : 9895804703

Chosen Option : 3

Q.1 J, K, L, M, N and O are six teachers. Each one teaches a different subject out of Hindi, English, Math, Science, Social Science and Arts, NOT necessarily in the same order. Each of them teaches on only one day, from Monday to Saturday, NOT necessarily in the same order. J teaches Arts on Saturday. L teaches neither English nor Social Science, but he teaches on Thursday. Wednesday is reserved for Maths taught by K. O teaches Science a day before N. Social Science is taught a day before Arts. Who teaches Social Science?

- Ans  1. M  
 2. O  
 3. N  
 4. J

Question ID : 9895804702

Chosen Option : 1

Q.1 Choose the option in which the figure marked 'X' is embedded.



X

Ans

- 1.
- 2.
- 3.
- 4.

Question ID : 9895804713

Chosen Option : 1

Q.1 In a certain code, SPADE is written as 45. How will ABODE be written in that code?

- Ans  1. 29  
 2. 59  
 3. 27  
 4. 39

Question ID : 9895804699

Chosen Option : 3

Q.1  
4

The statements below are followed by two conclusions labeled I and II. Assuming that the information in the statements is true, even if it appears at variance with generally established facts, decide which conclusion(s) logically and definitely follow(s) from the information given in the statements.

**Statements:**

- 1.) Some guns are spiders.
- 2.) Some spiders are peasants.

**Conclusion**

- I. Some guns are peasants.
- II. Some peasants are guns.

- Ans  1. Both conclusions follow.
2. Neither conclusion I nor conclusion II follows.
3. Only conclusion II follows.
4. Only conclusion I follows.

Question ID : 9895804704  
Chosen Option : 2

Q.1  
5 Select the option that will correctly replace the question mark (?) in the given pattern.

5	15	6
7	5	?
32	230	42

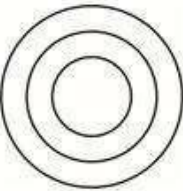
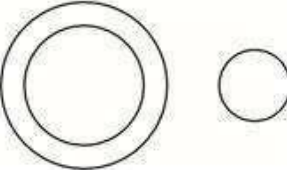
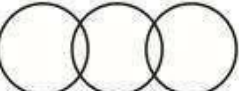
- Ans  1. 6
2. 13
3. 9
4. 11

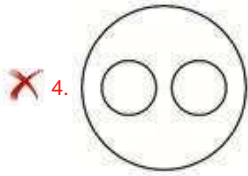
Question ID : 9895804709  
Chosen Option : 1

Q.1  
6 Select the Venn diagram that best represents the given set of classes.

Nepal, Asia, Kathmandu

Ans

1. 
2. 
3. 



Question ID : 9895804716  
Chosen Option : 1

Q.1 Seven friends O, P, Q, R, S, T and U are watching a movie sitting in a row. S is sitting at one extreme end. Q is sitting  
7 second to the right of S. P is sitting between O and Q. U is NOT sitting at any extreme end. R is sitting to the left of T.  
Who is sitting at the extreme left end?

- Ans
- 1. Q
  - 2. R
  - 3. P
  - 4. S

Question ID : 9895804700  
Chosen Option : 4

Q.1 In a certain code, UNHAPPY is written as PPYAHNU. How will FALLACY be written in that code?  
8

- Ans
- 1. ACYLALF
  - 2. ACYLLAF
  - 3. YCALLAF
  - 4. ACYLAAF

Question ID : 9895804698  
Chosen Option : 2

Q.1 Which number will follow next in the given number series?  
9

3, 16, 29, 42, ?

- Ans
- 1. 61
  - 2. 57
  - 3. 55
  - 4. 54

Question ID : 9895804705  
Chosen Option : 3

Q.2 Choose the odd one out of the given options.  
0

- Ans
- 1. DEP
  - 2. BFQ
  - 3. JPC
  - 4. LHE

Question ID : 9895804693  
Chosen Option : 3

Q.2

1 Find out the two signs to be interchanged to make the following equation correct.

$$22 + 11 \times 22 - 2 \div 3 = 45$$

- Ans
- 1.  $\times$  and  $\div$
  - 2.  $-$  and  $\times$
  - 3.  $-$  and  $\div$
  - 4.  $+$  and  $\div$

Question ID : 9895804710  
Chosen Option : 4

Q.2  
2 Choose the option that most closely resembles the mirror image of the given word when mirror is placed at right side.

SEQUEL

- Ans
- 1. SEQUEL
  - 2. SEQUAL
  - 3. SEQUEL
  - 4. SEQUEL

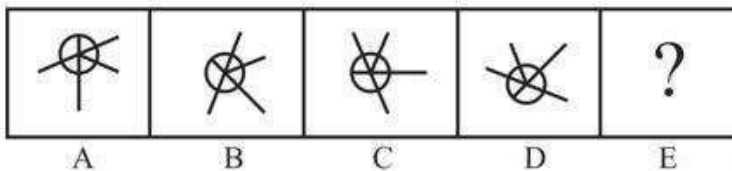
Question ID : 9895804714  
Chosen Option : 1

Q.2  
3 Choose the odd one out of the given options.

- Ans
- 1. Eagle
  - 2. Crow
  - 3. Owl
  - 4. Ostrich

Question ID : 9895804694  
Chosen Option : 4

Q.2  
4 Choose the option that would follow next in the given figure series.



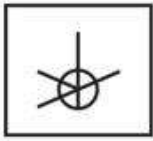
- Ans
- 1.
  - 2.



3.



4.



Question ID : 9895804711  
Chosen Option : 4

Q.2 Select the option that is related to the third term in the same way as the second term is related to the first term.  
5

ACG : DFD :: CIU : ?

- Ans  1. FLR  
 2. RLL  
 3. LFR  
 4. EGF

Question ID : 9895804697  
Chosen Option : 1

Q.2 What does PMGY stands for?  
6

- Ans  1. Pradhan Mantri Gramodaya Yojana  
 2. Pradhan Mantri Gram Yojana  
 3. Pradhan Mantri Gareeb Yojana  
 4. Pradhan Mantri Gurukul Yojana

Question ID : 9895802508  
Chosen Option : 1

Q.2 \_\_\_\_\_ is the highest military decoration awarded for displaying distinguished acts of valour during war.  
7

- Ans  1. Mahavir Chakra  
 2. Param Vir Chakra  
 3. Sena Medal  
 4. Shaurya Chakra

Question ID : 9895802516  
Chosen Option : 2

Q.2 'Deuce' is a term associated with \_\_\_\_\_.  
8

- Ans  1. baseball  
 2. cricket  
 3. hockey  
 4. lawn tennis

Question ID : 9895802502  
Chosen Option : 1

Q.2  
9 Garba is a folk dance which originated in \_\_\_\_\_.

- Ans
- 1. Rajasthan
  - 2. Maharashtra
  - 3. Bihar
  - 4. Gujarat

Question ID : 9895802513  
Chosen Option : 4

Q.3  
0 After Independence, \_\_\_\_\_ became India's first Deputy Prime Minister.

- Ans
- 1. Morarji Desai
  - 2. Sardar Vallabhai Patel
  - 3. Jagjivan Ram
  - 4. Charan Singh

Question ID : 9895802500  
Chosen Option : 2

Q.3  
1 Zamindari System was introduced by \_\_\_\_\_ in 1793.

- Ans
- 1. Curzon
  - 2. Cornwallis
  - 3. Clint
  - 4. Clive

Question ID : 9895802499  
Chosen Option : 2

Q.3  
2 Among the following options, \_\_\_\_\_ is the highest mountain peak of the Himalayas in India.

- Ans
- 1. Kanchenjunga
  - 2. Namcha Barwa
  - 3. Nanda Devi
  - 4. Mount Everest

Question ID : 9895802506  
Chosen Option : 1

Q.3  
3 Which of the following are NOT Trade Barriers?

- Ans
- 1. Embargo
  - 2. Subsidies
  - 3. Export Security
  - 4. Tariff Barriers

Question ID : 9895802509  
Chosen Option : 2

Q.3  
4 The vast meadows in the high elevation ranges of the Himalayas are called \_\_\_\_\_.

- Ans  1. Green meadows  
 2. Bhabar  
 3. Bugyal  
 4. Maru

Question ID : 9895802501  
Chosen Option : 1

Q.3  
5 \_\_\_\_\_ is the harvest festival of Kerala.

- Ans  1. Pongal  
 2. Lohri  
 3. Baisakhi  
 4. Onam

Question ID : 9895802515  
Chosen Option : 4

Q.3  
6 Who was the only Pakistani national who was awarded the Bharat Ratna?

- Ans  1. Khan Abdul Ghaffar Khan  
 2. Benazir Bhutto  
 3. Nawaz Sharif  
 4. Imran Khan

Question ID : 9895802517  
Chosen Option : 1

Q.3  
7 The river \_\_\_\_\_ is the only natural water source that drains inside a lake in the desert.

- Ans  1. Ganga  
 2. Luni  
 3. Teesta  
 4. Kali

Question ID : 9895802504  
Chosen Option : 2

Q.3  
8 \_\_\_\_\_ is the largest democracy the world.

- Ans  1. Sweden  
 2. Norway  
 3. India  
 4. Iceland

Question ID : 9895802510  
Chosen Option : 3

Q.3  
9 Saikhom Mirabai Chanu received the Padma Shri award in 2018, for \_\_\_\_\_.

- Ans  1. wrestling  
 2. weight lifting

- 3. athletics
- 4. cricket

Question ID : 9895802503  
Chosen Option : 1

Q.4  
0 The swampy belt of the northern Indian plains is known as \_\_\_\_\_.

- Ans
- 1. Bhangra
  - 2. Terai
  - 3. Doab
  - 4. Khadar

Question ID : 9895802505  
Chosen Option : 2

Q.4  
1 The green revolution did NOT include:

- Ans
- 1. use of advanced technology in farming.
  - 2. upgradation of the roads of the village.
  - 3. use of well-developed system of irrigation.
  - 4. high yielding varieties of seeds.

Question ID : 9895802507  
Chosen Option : 2

Q.4  
2 What is the name of the first mammal clone (sheep)?

- Ans
- 1. Dolly
  - 2. Sheep
  - 3. Polly
  - 4. Shan

Question ID : 9895802519  
Chosen Option : 1

Q.4  
3 The Bharatiya Janata Party's (BJP) origins lie in the Bharatiya Jana Sangh, founded by \_\_\_\_\_.

- Ans
- 1. Syama Prasad Mukherjee
  - 2. Atal Bihari Vajpayee
  - 3. Lal Krishna Advani
  - 4. Murli Manohar Joshi

Question ID : 9895802511  
Chosen Option : 1

Q.4  
4 Which of the following is NOT a classical dance form?

- Ans
- 1. Kathakali
  - 2. Odissi
  - 3. Kathak

4. Kalbeliya

Question ID : 9895802514

Chosen Option : 4

Q.4  
5 In India, states with \_\_\_\_\_ of population get more representatives.

- Ans
- 1. Higher Income
  - 2. Larger size
  - 3. Lower Income
  - 4. Small Size

Question ID : 9895802512

Chosen Option : 2

Q.4  
6 The pen name of Sampooran Singh Kalra, an Indian poet, lyricist and film director is \_\_\_\_\_.

- Ans
- 1. Taalib
  - 2. Daagh
  - 3. Gulzar
  - 4. Arzu

Question ID : 9895802518

Chosen Option : 3

Q.4  
7 The brain is a part of the \_\_\_\_\_ system.

- Ans
- 1. circulatory
  - 2. nervous
  - 3. endocrine
  - 4. digestive

Question ID : 9895802521

Chosen Option : 2

Q.4  
8 \_\_\_\_\_ is called 'the power house of the cell'.

- Ans
- 1. Nucleus
  - 2. Mitochondria
  - 3. Cell membrane
  - 4. Golgi bodies

Question ID : 9895802523

Chosen Option : 2

Q.4  
9 \_\_\_\_\_ is responsible for oxygen transportation in humans.

- Ans
- 1. Haemoglobin
  - 2. Mucus
  - 3. Melanin
  - 4. Lymph

Question ID : 9895802522

Chosen Option : 1

Q.5  
0 \_\_\_\_\_ is the best conductor of heat.

- Ans
- 1. Stainless steel
  - 2. Silver
  - 3. Mercury
  - 4. Lead

Question ID : 9895802520

Chosen Option : 3

Q.5  
1 The average daily rainfall of town A is 105 for first 2 days of the week, 84 for next 3 days and 49 for the last 2 days of the week. The total weekly rainfall for town B is 455. What will be the average daily rainfall of both the towns together?

- Ans
- 1. 145
  - 2. 138
  - 3. 159
  - 4. 152

Question ID : 9895804313

Chosen Option : 1

Q.5  
2 A train is moving with a uniform speed. Train crosses a bridge of length 340 meters in 35 seconds and a bridge of length 460 meters in 38 seconds. What is the speed of the train?

- Ans
- 1. 144 km/hr
  - 2. 72 km/hr
  - 3. 40 km/hr
  - 4. 80 km/hr

Question ID : 9895804326

Chosen Option : 1

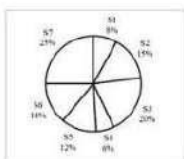
Q.5  
3 If cost price of 80 articles is equal to the selling price of 50 articles, then what will be the profit percentage?

- Ans
- 1. 37.5%
  - 2. 25%
  - 3. 60%
  - 4. 40%

Question ID : 9895804317

Chosen Option : 3

Q.5  
4 The pie chart given below shows the annual snowfall received by 7 states of a country. The snowfall is shown as a percentage of total annual snowfall of the country.



If the annual snowfall received by the country is 700 cm, then what is the monthly snowfall received by S5?

- Ans
- 1. 12 cm
  - 2. 21 cm

3. 5 cm

4. 7 cm

Question ID : 9895804333  
Chosen Option : 4

Q.5 If Rohit alone can complete one-fourth of a work in 32 days, then in how many days Rohit alone can complete the whole work?

Ans  1. 96 days

2. 64 days

3. 118 days

4. 128 days

Question ID : 9895804325  
Chosen Option : 4

Q.5 If  $X$  is 30% less than  $Y$  and  $Z$  is 50% less than  $X$ , then  $Z$  is how much percentage less than  $Y$ ?

Ans  1. 75%

2. 65%

3. 80%

4. 95%

Question ID : 9895804316  
Chosen Option : 2

Q.5 The average of numbers  $N_1$  and  $N_2$  is 17. The average of numbers  $N_2$  and  $N_3$  is 44. What is the difference between  $N_3$  and  $N_1$ ?

Ans  1. 27

2. 54

3. 36

4. 35

Question ID : 9895804312  
Chosen Option : 2

Q.5 The sides of a triangle are in the ratio 5 : 2 : 1. If the perimeter of the triangle is 88 cm, then what will be the length of the largest side?

Ans  1. 38 cm

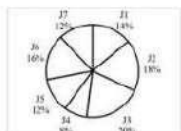
2. 40 cm

3. 55 cm

4. 44 cm

Question ID : 9895804328  
Chosen Option : 3

Q.5 The pie chart given below shows the time taken in 7 different procedures J1, J2, J3, J4, J5, J6 and J7 in making a car as a percentage of total time taken. The total time taken in making one car is 1200 hours.



What is the average time taken in procedures J3, J6 and J7?

- Ans  1. 180 hours  
 2. 192 hours  
 3. 168 hours  
 4. 204 hours

Question ID : 9895804332  
 Chosen Option : 2

Q.6 A sum of ₹ 12500 gives interest of ₹ 5625 in  $T$  years at simple interest. If the rate of interest is 7.5%, then what will be the value of  $T$ ?

- Ans  1. 8 years  
 2. 5 years  
 3. 6 years  
 4. 7 years

Question ID : 9895804322  
 Chosen Option : 3

Q.6 16 workers working 8 hours per day can demolish a building in 32 days. In how many days 24 workers working 12 hours per day can demolish the same building?

- Ans  1. 128/9 days  
 2. 128/3 days  
 3. 56/3 days  
 4. 56/9 days

Question ID : 9895804324  
 Chosen Option : 1

Q.6 Speed of Deepak and Vinod are in the ratio of 19 : 12 respectively. If speed of Vinod is 84 km/hr, then what will be the speed of Deepak?

- Ans  1. 133 km/hr  
 2. 126 km/hr  
 3. 114 km/hr  
 4. 117 km/hr

Question ID : 9895804320  
 Chosen Option : 1

Q.6 The data below shows the number of students in class A having secured different marks.

Marks	Students in class A
0 - 2	3
2 - 4	4
4 - 6	1
6 - 8	1
8 - 10	1
10 - 12	0

What is the mean marks of class A?

- Ans  1. 3.8  
 2. 1.6  
 3. 2.8  
 4. 2



Question ID : 9895804315  
Chosen Option : 4

Q.6  
4 Height of a right circular cone is 28 cm. If diameter of its base is 42 cm, then what will be the curved surface area of the cone?

- Ans
- 1. 4620 cm<sup>2</sup>
  - 2. 170 cm<sup>2</sup>
  - 3. 2310 cm<sup>2</sup>
  - 4. 1540 cm<sup>2</sup>

Question ID : 9895804329  
Chosen Option : 3

Q.6  
5 What is the value of  $(5 \div \frac{1}{5} \text{ of } \frac{25}{4} + \frac{20}{3} \div \frac{100}{9})$ ?

- Ans
- 1. 27/5
  - 2. 23/5
  - 3. 18/5
  - 4. 31/5

Question ID : 9895804310  
Chosen Option : 2

Q.6  
6 If Dheeraj can cross a 100 metres wide road in 25 seconds, then what is the speed of Dheeraj?

- Ans
- 1. 14 m/s
  - 2. 4 m/s
  - 3. 12 m/s
  - 4. 6 m/s

Question ID : 9895804327  
Chosen Option : 2

Q.6  
7 An article is sold for ₹ 5845 after giving discount of 12.5%. What is the marked price of article?

- Ans
- 1. ₹ 6680
  - 2. ₹ 6700
  - 3. ₹ 6800
  - 4. ₹ 6600

Question ID : 9895804314  
Chosen Option : 1

Q.6  
8 If cost price of an article is ₹ 1240 and loss is 32%, then what will be the selling price of the article?

- Ans
- 1. ₹ 780.72
  - 2. ₹ 759.60
  - 3. ₹ 820.62
  - 4. ₹ 843.20

Question ID : 9895804318  
Chosen Option : 4

Q.6  
9 What is the value of  $\left[\frac{4}{5} \div \frac{5}{8} - \frac{7}{5} + \frac{2}{15} \text{ of } \left(\frac{3}{2} \div \frac{4}{5}\right)\right]$ ?

- Ans
- 1. 17/80
  - 2. 21/100
  - 3. 15/29
  - 4. 13/100

Question ID : 9895804311  
Chosen Option : 4

Q.7  
0 If  $2A = 3B = 7C$ , then what is the ratio of  $A : B : C$ ?

- Ans
- 1. 2 : 3 : 7
  - 2. 21 : 14 : 6
  - 3. 21 : 10 : 6
  - 4. 14 : 10 : 21

Question ID : 9895804319  
Chosen Option : 2

Q.7  
1 The Least Common Multiple and Highest Common Factor of two numbers are 75 and 5 respectively. If their difference is 10, then what will be the sum of these two numbers?

- Ans
- 1. 30
  - 2. 40
  - 3. 20
  - 4. 25


Question ID : 9895804309  
Chosen Option : 2

Q.7  
2 A sum becomes 8 times of itself in 7 years at the rate of compound interest (interest is compounded annually). In how many years will the sum becomes 4096 times of itself?

- Ans
- 1. 56
  - 2. 28
  - 3. 24
  - 4. 16

Question ID : 9895804323  
Chosen Option : 2

Q.7  
3 The bar chart given below shows the ratio of expenditure to revenue for seven consecutive years Y1, Y2, Y3, Y4, Y5, Y6 and Y7.



Revenue for year Y4 is ₹ 22500. What is the profit for year Y4?

- Ans
- 1. ₹ 2500
  - 2. ₹ 2750
  - 3. ₹ 2250
  - 4. Cannot be determined

Question ID : 9895804331  
Chosen Option : 3

Q.7 The volume of a right circular cone is equal to the volume of that right circular cylinder whose height is 48 cm and diameter of its base is 20 cm. If the height of the cone is 16 cm, then what will be the diameter of its base?

- Ans
- 1. 45 cm
  - 2. 130 cm
  - 3. 25 cm
  - 4. 60 cm

Question ID : 9895804330  
Chosen Option : 4

Q.7 If  $s : u : v : w = 2 : 9 : 6 : 7$  and  $s + u + v + w = 864$ , then what is the value of  $s + u + w$ ?

- Ans
- 1. 734
  - 2. 722
  - 3. 612
  - 4. 648

Question ID : 9895804321  
Chosen Option : 4

Section : English Language

Q.1 Select the most appropriate ANTONYM of the given word.

SEMBLANCE

- Ans
- 1. Difference
  - 2. Guise
  - 3. Simile
  - 4. A likeness

Question ID : 9895804184  
Chosen Option : --

Q.2 Fill in the blank with the most appropriate word.

Miserly people find it difficult to part \_\_\_\_\_ any of their money for charitable purposes.

- Ans
- 1. for
  - 2. from
  - 3. with
  - 4. about

Question ID : 9895804200  
Chosen Option : --

Q.3 Select the most appropriate option to substitute the underlined segment in the given sentence. If there is no need to substitute it, select No Improvement.

Subhash Palekar a farmer received the Padma Shri award this year in his campaign for zero budget natural farming.

- Ans
- 1. at his campaign with zero budget
  - 2. No Improvement
  - 3. for his campaign for zero budget
  - 4. for his campaign to zero budget

Question ID : 9895804199

Chosen Option : --

Q.4 Select the synonym of the given word.

**FAÇADE**

- Ans
- 1. Elevation
  - 2. Ceiling
  - 3. Interior
  - 4. Frontage

Question ID : 9895804183

Chosen Option : --

Q.5 Select the most appropriate word to fill in the blank.

I would rather serve \_\_\_\_\_.

- Ans
- 1. than beg
  - 2. than to beg
  - 3. but to beg
  - 4. but beg

Question ID : 9895804201

Chosen Option : --

Q.6 Select the correctly spe

- Ans
- 1. Discrepancy
  - 2. Descrepancy
  - 3. Discrepency
  - 4. Discripancy

Question ID : 9895804189

Chosen Option : --

Q.7 Select the synonym of the given word.

**IMITATION**

- Ans
- 1. Artificial
  - 2. Genuine
  - 3. Different
  - 4. Real

Question ID : 9895804182

Chosen Option : --

Q.8 Select the correctly spelt word.

- Ans
- 1. Liesure
  - 2. Lisure

3. Leisure

4. Leisour

Question ID : 9895804188

Chosen Option : --

Q.9 Select the most appropriate word to fill in the blank.

A house to house survey was \_\_\_\_\_ conducted to register more than seventeen crore voters.

Ans  1. meticulously

2. firmly

3. punctually

4. wearily

Question ID : 9895804193

Chosen Option : --

Q.1  
0 Select the most appropriate meaning of the given idiom.

Storm in a teacup

Ans  1. A stormy tea party

2. A big fuss over a small issue

3. A grand get-together

4. A highly risky business

Question ID : 9895804186

Chosen Option : --

Q.1  
1 Select the word which means the same as the group of words given.

Something never done or known before

Ans  1. Unanimous

2. Unconditioned

3. Uncanny

4. Unprecedented

Question ID : 9895804191

Chosen Option : --

Q.1  
2 Identify the segment in the sentence which contains the grammatical error from the given options.

When he returned to the dining-room the guests left and the servants were clearing the tables.

Ans  1. to the dining-room

2. When he

3. the guests left

4. were clearing

Question ID : 9895804195

Chosen Option : --

Q.1  
3 Select the word which means the same as the group of words given.

The life history of a person written by himself

- Ans
- 1. Novel
  - 2. Fiction
  - 3. Autobiography
  - 4. Biography

Question ID : 9895804190  
Chosen Option : --

Q.1  
4 Select the most appropriate ANTONYM of the given word.

RAMBLING

- Ans
- 1. Deceptive
  - 2. Confused
  - 3. Irregular
  - 4. Coherent

Question ID : 9895804185  
Chosen Option : --

Q.1  
5 Fill in the blank with the most appropriate word.

Reason is the highest faculty \_\_\_\_\_ on man by his creator.

- Ans
- 1. given
  - 2. donated
  - 3. endowed
  - 4. bestowed

Question ID : 9895804192  
Chosen Option : --

Q.1  
6 Identify the segment in the sentence which contains the grammatical error from the given options.

He was deprived from the benefits of college education owing to the death of his father.

- Ans
- 1. owing to
  - 2. the benefits of
  - 3. college education
  - 4. He was deprived from

Question ID : 9895804194  
Chosen Option : --

Q.1  
7 Select the most appropriate option to substitute the underlined segment in the given sentence. If there is no need to substitute it, select No Improvement.

He spent all which he has in order to perfect his invention.

- Ans
- 1. that he had
  - 2. what he is having

3. No Improvement

4. which he has

Question ID : 9895804198

Chosen Option : --

Q.1  
8 Select the most appropriate meaning of the idiom.

To burn all bridges

Ans  1. To destroy all relations

2. To light a fire

3. To chase all enemies

4. To damage a path

Question ID : 9895804187

Chosen Option : --

Q.1  
9 Identify the segment in the sentence which contains the grammatical error from the given options.

This bottle must not be make to stand close to the fire.

Ans  1. close to the fire

2. This bottle

3. make to stand

4. must not be

Question ID : 9895804196

Chosen Option : --

### Comprehension:

In the following passage some words have been deleted. Fill in the blanks with the help of the alternatives given.  
Science has made an (1) \_\_\_\_\_ contribution to the relief of human suffering, and humanity (2) \_\_\_\_\_ a deep (3) \_\_\_\_\_ of gratitude to scientists whose (4) \_\_\_\_\_ and sacrifices have led to many (5) \_\_\_\_\_ discoveries and inventions.

#### SubQuestion No : 20

Q.2  
0 Fill in the blank (1) with the most appropriate option.

Ans  1. enormous

2. intensive

3. excessive

4. enterprising

Question ID : 9895804203

Chosen Option : --

### Comprehension:

In the following passage some words have been deleted. Fill in the blanks with the help of the alternatives given.  
Science has made an (1) \_\_\_\_\_ contribution to the relief of human suffering, and humanity (2) \_\_\_\_\_ a deep (3) \_\_\_\_\_ of gratitude to scientists whose (4) \_\_\_\_\_ and sacrifices have led to many (5) \_\_\_\_\_ discoveries and inventions.

#### SubQuestion No : 21

Q.2  
1 Fill in the blank (2) with the most appropriate option.

Ans  1. thinks

2. offers

3. feels

4. owes

Question ID : 9895804204  
Chosen Option : --

**Comprehension:**

In the following passage some words have been deleted. Fill in the blanks with the help of the alternatives given.  
Science has made an (1) \_\_\_\_\_ contribution to the relief of human suffering, and humanity (2) \_\_\_\_\_ a deep (3) \_\_\_\_\_ of gratitude to scientists whose (4) \_\_\_\_\_ and sacrifices have led to many (5) \_\_\_\_\_ discoveries and inventions.

**SubQuestion No : 22**

Q.2  
2 Fill in the blank (3) with the most appropriate option.

Ans  1. feeling

2. sense

3. fund

4. amount

Question ID : 9895804205  
Chosen Option : --

**Comprehension:**

In the following passage some words have been deleted. Fill in the blanks with the help of the alternatives given.  
Science has made an (1) \_\_\_\_\_ contribution to the relief of human suffering, and humanity (2) \_\_\_\_\_ a deep (3) \_\_\_\_\_ of gratitude to scientists whose (4) \_\_\_\_\_ and sacrifices have led to many (5) \_\_\_\_\_ discoveries and inventions.

**SubQuestion No : 23**

Q.2  
3 Fill in the blank (4) with the most appropriate option.

Ans  1. labour

2. achievements

3. success

4. discoveries

Question ID : 9895804206  
Chosen Option : --

**Comprehension:**

In the following passage some words have been deleted. Fill in the blanks with the help of the alternatives given.  
Science has made an (1) \_\_\_\_\_ contribution to the relief of human suffering, and humanity (2) \_\_\_\_\_ a deep (3) \_\_\_\_\_ of gratitude to scientists whose (4) \_\_\_\_\_ and sacrifices have led to many (5) \_\_\_\_\_ discoveries and inventions.

**SubQuestion No : 24**

Q.2  
4 Fill in the blank (5) with the most appropriate option.

Ans  1. curious

2. unusual

3. dynamic

4. useful

Question ID : 9895804207  
Chosen Option : --

Q.2  
5 Select the most appropriate option to substitute the underlined segment in the given sentence. If there is no need to substitute it, select No Improvement

The Finance Minister has announce big schemes for farmers, women and unorganized workers in his Budget speech.

Ans



- 1. have announced
- 2. has announced
- 3. has been announcing
- 4. No Improvement

Question ID : 9895804197  
Chosen Option : --

Section : Hindi Language

Q.1 दिए गए वाक्य का वह भाग ज्ञात करें जिसमें कोई त्रुटि है।

सामान्य जनता को जागृत करने के लिए पुस्तकें प्रकाशित किये जा रहे हैं।

- Ans
- 1. सामान्य जनता को
  - 2. जागृत करने के लिए
  - 3. किये जा रहे हैं।
  - 4. पुस्तकें प्रकाशित

Question ID : 9895803572  
Chosen Option : 3

Comprehension:

दिए गए अनुच्छेद में कुछ शब्द हटा दिए गए हैं। दिए गए विकल्पों की सहायता से रिक्त स्थान भरें। प्रत्येक संख्या के लिए सबसे उपयुक्त विकल्प का चयन करें।

समझने वाली एक महत्वपूर्ण बात यह भी है कि सारी \_\_\_\_\_(1) हमारे अकेले की नहीं होती। सारे \_\_\_\_\_(2) हमारे चढ़ने के लिए नहीं होते। कुछ चढ़ाइयाँ ऐसी भी होती हैं जो पूरे \_\_\_\_\_(3) को एक साथ चढ़नी होती है और यह बात पूरे समाज को समझाना भी अपने आप में पहाड़ होता है। मगर इस पर \_\_\_\_\_(4) का दायित्व भी उन \_\_\_\_\_(5) की होती है जिन्हें यह पहाड़ दिखाई देता है।

SubQuestion No : 2

Q.2 गद्यांश में संकेतित रिक्त स्थान (1) के लिए उपयुक्त शब्द होगा -

- Ans
- 1. नदियाँ
  - 2. निर्णय
  - 3. जवाब
  - 4. लड़ाइयाँ

Question ID : 9895803581  
Chosen Option : 4

Comprehension:

दिए गए अनुच्छेद में कुछ शब्द हटा दिए गए हैं। दिए गए विकल्पों की सहायता से रिक्त स्थान भरें। प्रत्येक संख्या के लिए सबसे उपयुक्त विकल्प का चयन करें।

समझने वाली एक महत्वपूर्ण बात यह भी है कि सारी \_\_\_\_\_(1) हमारे अकेले की नहीं होती। सारे \_\_\_\_\_(2) हमारे चढ़ने के लिए नहीं होते। कुछ चढ़ाइयाँ ऐसी भी होती हैं जो पूरे \_\_\_\_\_(3) को एक साथ चढ़नी होती है और यह बात पूरे समाज को समझाना भी अपने आप में पहाड़ होता है। मगर इस पर \_\_\_\_\_(4) का दायित्व भी उन \_\_\_\_\_(5) की होती है जिन्हें यह पहाड़ दिखाई देता है।

SubQuestion No : 3

Q.3 गद्यांश में संकेतित रिक्त स्थान (2) के लिए उपयुक्त शब्द होगा -

- Ans
- 1. किताब
  - 2. सागर
  - 3. पहाड़
  - 4. सोच

Question ID : 9895803582  
Chosen Option : 3

Comprehension:

दिए गए अनुच्छेद में कुछ शब्द हटा दिए गए हैं। दिए गए विकल्पों की सहायता से रिक्त स्थान भरें। प्रत्येक संख्या के लिए सबसे उपयुक्त विकल्प का चयन करें।

समझने वाली एक महत्वपूर्ण बात यह भी है कि सारी \_\_\_\_\_(1) हमारे अकेले की नहीं होती। सारे \_\_\_\_\_(2) हमारे चढ़ने के लिए नहीं होते। कुछ चढ़ाइयाँ ऐसी भी होती हैं जो पूरे \_\_\_\_\_(3) को एक साथ चढ़नी होती है और यह बात पूरे समाज को समझाना भी अपने आप में पहाड़ होता है। मगर इस पर \_\_\_\_\_(4) का दायित्व भी उन \_\_\_\_\_(5) की होती है जिन्हें यह पहाड़ दिखाई देता है।

SubQuestion No : 4

Q.4 गद्यांश में संकेतित रिक्त स्थान (3) के लिए उपयुक्त शब्द होगा -

- Ans
- 1. समाज
  - 2. धूप
  - 3. स्थान
  - 4. चुनाव

Question ID : 9895803583  
Chosen Option : 1

Comprehension:

दिए गए अनुच्छेद में कुछ शब्द हटा दिए गए हैं। दिए गए विकल्पों की सहायता से रिक्त स्थान भरें। प्रत्येक संख्या के लिए सबसे उपयुक्त विकल्प का चयन करें।

समझने वाली एक महत्त्वपूर्ण बात यह भी है कि सारी \_\_\_\_\_(1) हमारे अकेले की नहीं होती। सारे \_\_\_\_\_(2) हमारे चढ़ने के लिए नहीं होते। कुछ चढ़ाइयाँ ऐसी भी होती हैं जो पूरे \_\_\_\_\_(3) को एक साथ चढ़नी होती है और यह बात पूरे समाज को समझाना भी अपने आप में पहाड़ होता है। मगर इस पर \_\_\_\_\_(4) का दायित्व भी उन \_\_\_\_\_(5) की होती है जिन्हें यह पहाड़ दिखाई देता है।

SubQuestion No : 5

Q.5 गद्यांश में संकेतित रिक्त स्थान (4) के लिए उपयुक्त शब्द होगा -

- Ans
- 1. सोने
  - 2. खाने
  - 3. चढ़ने
  - 4. हँसने

Question ID : 9895803584

Chosen Option : 3

Comprehension:

दिए गए अनुच्छेद में कुछ शब्द हटा दिए गए हैं। दिए गए विकल्पों की सहायता से रिक्त स्थान भरें। प्रत्येक संख्या के लिए सबसे उपयुक्त विकल्प का चयन करें।

समझने वाली एक महत्त्वपूर्ण बात यह भी है कि सारी \_\_\_\_\_(1) हमारे अकेले की नहीं होती। सारे \_\_\_\_\_(2) हमारे चढ़ने के लिए नहीं होते। कुछ चढ़ाइयाँ ऐसी भी होती हैं जो पूरे \_\_\_\_\_(3) को एक साथ चढ़नी होती है और यह बात पूरे समाज को समझाना भी अपने आप में पहाड़ होता है। मगर इस पर \_\_\_\_\_(4) का दायित्व भी उन \_\_\_\_\_(5) की होती है जिन्हें यह पहाड़ दिखाई देता है।

SubQuestion No : 6

Q.6 गद्यांश में संकेतित रिक्त स्थान (5) के लिए उपयुक्त शब्द होगा -

- Ans
- 1. सुखों
  - 2. रोजे
  - 3. दुखों
  - 4. व्यक्तियों

Question ID : 9895803585

Chosen Option : 4

Q.7

दिए गए वाक्य में रेखांकित खंड को प्रतिस्थापित करने के लिए उपयुक्त विकल्प का चयन करें।

बादल फटने से डेढ़ सौ व्यक्तियों का मृत्यु हो गई।

Ans

1. डेढ़ सौ व्यक्तियों से मृत्यु हो गई।
2. डेढ़ सौ व्यक्तियों के मृत्यु हो गई।
3. डेढ़ सौ व्यक्तियों को मृत्यु हो गई।
4. डेढ़ सौ व्यक्तियों की मृत्यु हो गई।

Question ID : 9895803575  
Chosen Option : 4

Q.8 दिए गए वाक्य में रेखांकित खंड को प्रतिस्थापित करने के लिए उपयुक्त विकल्प का चयन करें।

सेठजी मंदिर में गए, उन्होंने यहाँ आकर गरीबों को कंबल बाँटे।

Ans

1. उन्होंने वहाँ आकर
2. उन्होंने वहाँ जाकर
3. उन्होंने यहाँ जाकर
4. उन्होंने यहाँ हटकर

Question ID : 9895803574  
Chosen Option : 2

Q.9 दिए गए शब्द का विलोम चुनें।

शुद्ध

Ans

1. अशुद्ध
2. गलत
3. पवित्र
4. विरुद्ध

Question ID : 9895803586  
Chosen Option : 1

Q.10 सही वर्तनी वाले शब्द का चयन करें।

Ans

1. आकर्शक
2. आकर्षक
3. आक्रषक
4. अकार्षक

Question ID : 9895803594  
Chosen Option : 2

Q.11 रिक्त स्थान को भरने के लिए सबसे उपयुक्त शब्द का चयन करें।

हमें पेड़-पौधों की \_\_\_\_\_ करनी चाहिए।

- Ans
- 1. कटाई
  - 2. उपेक्षा
  - 3. देखभाल
  - 4. पिटाई

Question ID : 9895803576  
Chosen Option : 3

Q.1  
2 रिक्त स्थान को भरने के लिए सबसे उपयुक्त शब्द का चयन करें।  
मैं उसकी \_\_\_\_\_ को देखकर मुग्ध हो गया।

- Ans
- 1. सुन्दरता
  - 2. विफलता
  - 3. क्रोध
  - 4. बेबसी

Question ID : 9895803577  
Chosen Option : 1

Q.1  
3 दिये गये वाक्यांश के लिए एक शब्द दीजिये।

जो भूमि उपजाऊ हो

- Ans
- 1. बेजान
  - 2. उर्वर
  - 3. बंजर
  - 4. कटौली

Question ID : 9895803593  
Chosen Option : 2

Q.1  
4 निम्नलिखित में से उस विकल्प का चयन करें जो ' आग में घी डालना ' मुहावरे का अर्थ व्यक्त करता है।

- Ans
- 1. बहुत अधिक क्रोध करना
  - 2. आग में घी डालकर हवन करना
  - 3. आग जलाना
  - 4. क्रोध को और भड़काना

Question ID : 9895803590  
Chosen Option : 4

Q.1  
5 रिक्त स्थान को भरने के लिए सबसे उपयुक्त शब्द का चयन करें।

तुम्हारा पत्र पढ़कर \_\_\_\_\_ प्रसन्नता हुई।

- Ans
- 1.

2. अत्यंत

3. अभिन्न

4. उन्नत

Question ID : 9895803578

Chosen Option : 2

Q.1  
6 दिए गए शब्द के पर्यायवाची शब्द का चयन करें।

कुंतल

Ans  1. बाघ

2. केश

3. बाण

4. बालू

Question ID : 9895803589

Chosen Option : 1

Q.1  
7 सही वर्तनी वाले शब्द का चयन करें।

Ans 1. प्रकृतिक

2. प्राकृतिक

3. प्राकृतिक

4. पारकृतिक

Question ID : 9895803595

Chosen Option : 3

Q.1  
8 दिए गए शब्द के पर्यायवाची शब्द का चयन करें।

हिम

Ans  1. जल

2. अग्नि

3. बर्फ

4. वायु

Question ID : 9895803588

Chosen Option : 3

Q.1  
9 दिए गए शब्द का विलोम चुनें।

क्रय

Ans  1. अहित

2. बंधन

3. निर्यात

✓ 4. विक्रय

Question ID : 9895803587

Chosen Option : 4

Q.2 दिए गए वाक्य का वह भाग ज्ञात करें जिसमें कोई त्रुटि है।

मन की शक्ति जैसे तो प्रकृति की देन है, फिर भी इसकी आंशिक निर्माण माता-पिता पर निर्भर करता है।

Ans

1. फिर भी इसकी आंशिक निर्माण
2. जैसे तो प्रकृति की देन है,
- ✗ 3. मन की शक्ति
4. माता-पिता पर निर्भर करता है।

Question ID : 9895803570

Chosen Option : 1

Q.2 रिक्त स्थान को भरने के लिए सबसे उपयुक्त शब्द का चयन करें।

गौरव सौरभ की \_\_\_\_\_ अधिक मोटा है।

Ans

- ✗ 1. तुलना
- ✗ 2. उपेक्षा
- ✗ 3. ज्यादा
- ✓ 4. अपेक्षा

Question ID : 9895803579

Chosen Option : 4

Q.2 निम्नलिखित में से उस विकल्प का चयन करें जो 'आटे दाल का भाव मालूम होना' मुहावरे का अर्थ व्यक्त करता है।

Ans

1. कठिनाई का ज्ञान होना
2. महंगाई का बढ़ना
- ✗ 3. परिस्थिति से भागना
- ✗ 4. आटे और दाल का भाव बताना

Question ID : 9895803591

Chosen Option : 1

Q.2 दिये गये वाक्यांश के लिए एक शब्द दीजिये।

कम खाने वाला

Ans

- ✗ 1. शाकाहारी
2. मांसाहारी
3. सर्वाहारी
- ✓ 4. अल्पाहारी

Question ID : 9895803592

Chosen Option : 4

Q.2  
4 दिए गए वाक्य का वह भाग ज्ञात करें जिसमें कोई त्रुटि है।

अतीत की घटनाओं से ही व्यक्ति सीखना सकता है और प्रगति के पथ पर जा सकता है।

Ans

1. और प्रगति के पथ पर
2. अतीत की घटनाओं से ही
3. जा सकता है।
4. व्यक्ति सीखना सकता है

Question ID : 9895803571

Chosen Option : 4

Q.2  
5 दिए गए वाक्य में रेखांकित खंड को प्रतिस्थापित करने के लिए उपयुक्त विकल्प का चयन करें।

ऋतु परिवर्तन के कारण मनाए जाने वाले त्योहार हमें प्रकृति से निकट ले जाते हैं।

Ans

1. प्रकृति के लिए निकट ले जाते हैं।
2. प्रकृति को निकट ले जाते हैं।
3. प्रकृति की निकट ले जाते हैं।
4. प्रकृति के निकट ले जाते हैं।

Question ID : 9895803573

Chosen Option : 4