

Constable (GD) in CAPFs, NIA, SSF and Rifleman (GD) in Assam Rifles Examination, 2018

Roll No. :	
Registration No.	
Name :	
Exam Venue :	
Exam Time :	9:00 AM - 10:30 AM
Exam Date :	13/02/2019

Section : General Section

Q.1 Select the option that is related to the third term in the same way as the second term is related to the first term.

Mouse : Rodent :: Bee : ?

- Ans
- 1. Drone
 - 2. Insect
 - 3. Reptile
 - 4. Bird

Question ID : 9895802702

Chosen Option : 1

Q.2

Seven friends O, P, Q, R, S, T and U are watching a movie sitting in a row. S is sitting at one extreme end. Q is sitting second to the right of S. P is sitting between O and Q. U is not sitting at any extreme end. R is sitting to the left of T.

- Ans
1. R sitt the middle?
- 2. Q
 - 3. P
 - 4. U


Question ID : 9895802707

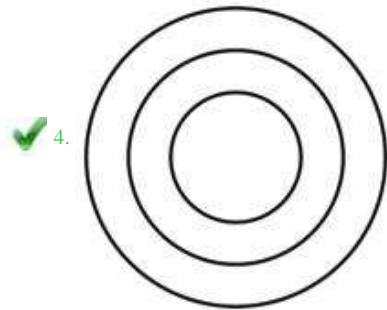
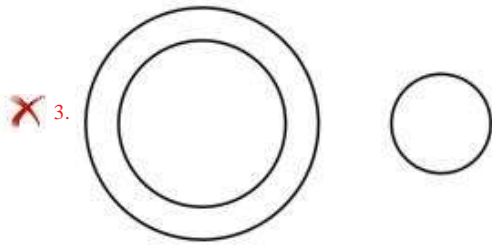
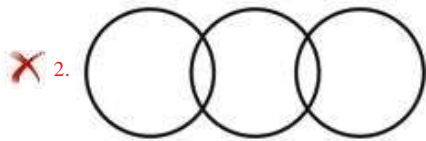
Chosen Option : 3

Q.3

Select the Venn diagram that best represents the given set of classes:

Ans Udaipur, Rajasthan, India

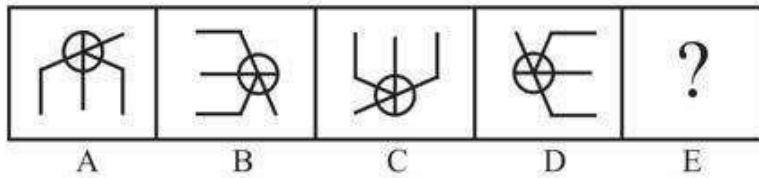




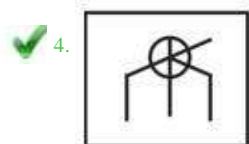
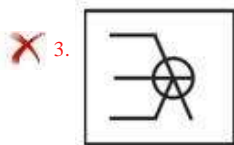
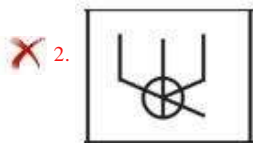
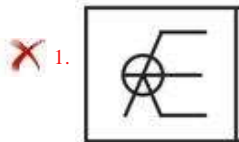
Question ID : 9895802723

Chosen Option : 4

Q.4 Choose the option that would follow next in the given figure series.



Ans



Question ID : 9895802718

Chosen Option : 4

Q.5 Select the option that will correctly replace the question mark (?) in the series.

4, 16, 28, 40, ?

Ans 1. 69

2. 52

3. 51

4. 56

Question ID : 9895802712

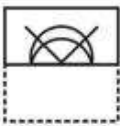
Chosen Option : 2

Q.6 A square transparent sheet with a pattern is given. How will the pattern appear when the transparent sheet is folded along the dotted line?

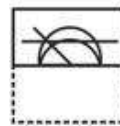


Ans

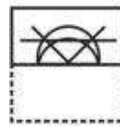
1.



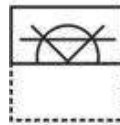
2.



3.



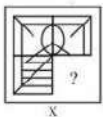
4.



Question ID : 9895802722

Chosen Option : 4

Q.7 Select a figure from amongst the four alternatives that when placed in the blank space (?) of figure X will complete the pattern. (Rotation is not allowed).



Ans

1.



2.



3.





Question ID : 9895802719
Chosen Option : 2

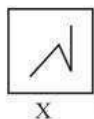
Q.8 Select the option that is related to the third number in the same way as the second number is related to the first number.

11: 225 :: 14: ?

- Ans
- 1. 169
 - 2. 324
 - 3. 144
 - 4. 225

Question ID : 9895802714
Chosen Option : 4

Q.9 Choose the option in which the figure marked 'X' is embedded. (Rotation is not allowed)



Ans


- 1.
- 2.
- 3.
- 4.

Question ID : 9895802720
Chosen Option : 4

Q.1 Select the option that is related to the third term in the same way as the second term is related to the first term.
0

Unhappy : Sad :: Speak : ?

- Ans
- 1. Shout
 - 2. Desire

 3. Ask

 4. Listen

Question ID : 9895802703

Chosen Option : 1

Q.1 The statements below are followed by two conclusions labeled I and II. Assuming that the information in the statements is true, even if it appears at variance with generally established facts, decide which conclusion (s) logically and definitely follow (s) from the information given in the statements.





Statements:

- 1) All hens are lions.
- 2) All lions are cats.

Conclusion

I. All cats are hens.





II. Some cats are hens.

- Ans**
-  1. Only conclusion I follows.
 -  2. Only conclusion II follows.
 -  3. Either conclusion I or conclusion II follows.
 -  4. Both conclusions follow.

Question ID : 9895802710

Chosen Option : 2

Q.1 In a certain code, SCIENTIST is written as TSITNEISC. How will GOLDSMITH be written in that code?

- Ans**
-  1. HTIMSDLOG
 -  2. HTISMDLGO
 -  3. HTIMSDLGO
 -  4. HITMSDLOG

Question ID : 9895802705

Chosen Option : 1

Q.1 Choose the option that most closely resembles the mirror image of the given word when mirror is placed at right side.

CAPSIZE

- Ans**
-  1. CAPSIZE
 -  2. CPFSIZE
 -  3. CPFSIZP
 -  4. CAPSIZE

Question ID : 9895802721

Chosen Option : 3

Q.1
4 Select the option that will correctly replace the question mark (?) in the given pattern.

13	22	12
117	?	132
9	7	11

- Ans
- 1. 117
 - 2. 154
 - 3. 165
 - 4. 119

Question ID : 9895802716

Chosen Option : 2

Q.1
5 Select the option that will correctly replace the question mark (?) in the series.

OJY, MLW, KNU, IPS, ?

- Ans
- 1. GRQ
 - 2. GRP
 - 3. GPO
 - 4. GRR

Question ID : 9895802699

Chosen Option : 1

Q.1
6 Eight friends A, B, C, D, E, F, G and H are sitting around a circular table facing each other for a lunch. A is opposite F and third to the right of B. G is between F and D. H is to the left of D. E is between C and A. Who is sitting opposite C?

- Ans
- 1. D
 - 2. F
 - 3. B
 - 4. A

Question ID : 9895802708

Chosen Option : 1

Q.1
7 Choose the odd one out of the given options.

- Ans
- 1. MIF
 - 2. RGC
 - 3. DPR
 - 4. EFQ

Question ID : 9895802700

Chosen Option : 3

Q.1 J, K, L, M, N and O are six teachers. Each one teaches a different subject out of Hindi, English, Math, Science, Social Science and Arts, not necessarily in the same order. Each of them teaches on only one day, from Monday to Saturday, not necessarily in the same order. J teaches Arts on Saturday. L teaches neither English nor Social Science, but he teaches on Thursday. Wednesday is reserved for Maths taught by K. O teaches Science a day before N. Social Science is taught a day before Arts. Which subject is taught by N?

- Ans
- 1. Arts
 - 2. Hindi
 - 3. English
 - 4. Science

Question ID : 9895802709
Chosen Option : 3

Q.1 Select the option that will correctly replace the question mark (?) in the series.

9, 10, 18, 45, ?

- Ans
- 1. 107
 - 2. 111
 - 3. 109
 - 4. 110

Question ID : 9895802713
Chosen Option : 3

Q.2 Find out the two signs to be interchanged to make the following equation correct.

$$13 + 26 \times 2 - 5 \div 3 = 11$$

- Ans
- 1. - and \div
 - 2. \times and \div
 - 3. + and -
 - 4. - and \times

Question ID : 9895802717
Chosen Option : 2

Q.2 दिए गए विकल्पों में से असंगत का चयन करें।

- Ans
- 1. लहसुन
 - 2. अदरक
 - 3. आलू
 - 4. टमाटर

Question ID : 9895802701
Chosen Option : 4

Q.2 The statements below are followed by two conclusions labeled I and II. Assuming that the information in the statements
2 is true, even if it appears at variance with generally established facts, decide which conclusion(s) logically and definitely follow(s) from the information given in the statements.

Statements:

- 1) Some men are insects.
- 2) Some larvae are insects.

Conclusion

I. Some insects are larvae.

II. Some insects are men.

Ans 1. Only conclusion I follows.

2. Both conclusions follow.

3. Only conclusion II follows.

4. Neither conclusion I nor conclusion II follows.

Question ID : 9895802711

Chosen Option : 2

Q.2 Select the option that is related to the third term in the same way as the second term is related to the first term.
3

BAC : GFH :: LKM : ?

Ans 1. QRP

2. QPR

3. QOP

4. QPO

Question ID : 9895802704

Chosen Option : 2

Q.2 Choose the odd number out of the given options.
4

Ans 1. 109

2. 561

3. 127

4. 307

Question ID : 9895802715

Chosen Option : 2

Q.2 In a certain code, REFUSE is written as 74. How will KIDNAP be written in that code?
5

Ans 1. 59

2. 55

3. 54

4. 57

Question ID : 9895802706
Chosen Option : 2

Q.2
6 Which of the following festivals is associated with the 'Vaman' incarnation of Vishnu?

- Ans
- 1. Kumbha
 - 2. Bihu
 - 3. Onam
 - 4. Janmashtami

Question ID : 9895802551
Chosen Option : 4

Q.2
7 As of February 2019, who is the current Vice-Chairman of Niti Aayog?

- Ans
- 1. Shaktikanta Das
 - 2. Rajiv Kumar
 - 3. Shakti Sinha
 - 4. Urjit Patel

Question ID : 9895802554
Chosen Option : 2

Q.2
8 The Indian constitution declares India as:

- Ans
- 1. a Federation of States
 - 2. a Confederation of States
 - 3. a Union of States
 - 4. a Association of States

Question ID : 9895802560
Chosen Option : 3

Q.2
9 Which of the following is NOT a determinant of the patterns of drainage system?

- Ans
- 1. Climatic conditions of the area
 - 2. Source of the drainage system
 - 3. Underlying rock structure
 - 4. Slope of the land

Question ID : 9895802570
Chosen Option : 2

Q.3
0 In the context of Sufi tradition, the term 'khanqah' stood for:

- Ans
- 1. the Hell
 - 2. a graveyard

- 3. a hospice
- 4. the Heaven

Question ID : 9895802572
Chosen Option : 3

Q.3
1 Which of the following is NOT true about nuclear fusion?

- Ans
- 1. It produces much more energy than nuclear fission.
 - 2. The process is used for making nuclear bomb.
 - 3. Electricity production through this process is commercially less viable than nuclear fission.
 - 4. It is the source of energy in the stars.

Question ID : 9895802565
Chosen Option : 3

Q.3
2 Which of the following pair is NOT correctly matched?

- Ans
- 1. Magnesium hydroxide – $MgOH_2$
 - 2. Sulphuric acid – H_2SO_4
 - 3. Ammonium hydroxide – NH_4OH
 - 4. Nitric acid – HNO_3

Question ID : 9895802567
Chosen Option : 3

Q.3
3 Which of the following money transfer systems allows 24×7×365 transfer of money?

- Ans
- 1. IMPS
 - 2. Cheque
 - 3. NEFT
 - 4. RTGS

Question ID : 9895802558
Chosen Option : 1

Q.3
4 Which of the following is NOT an artificial ecosystem?

- Ans
- 1. Reservoir of a dam
 - 2. Paddy-field
 - 3. Forest
 - 4. Garden

Question ID : 9895802564
Chosen Option : 3

Q.3
5 Which of the followings has been dubbed as 'India's maiden human spaceflight programme'?

- Ans
- 1. Mangalyaan – II
 - 2. Gaganyaan
 - 3. Chandrayaan – II
 - 4. Aditya L – 1

Question ID : 9895802555
Chosen Option : 4

Q.3
6 Which of the followings was NOT a Harappan city?

- Ans
- 1. Lothal
 - 2. Dholavira
 - 3. Mehrgarh
 - 4. Sotkakah

Question ID : 9895802573
Chosen Option : 1

Q.3
7 _____ was awarded the Noble Peace Prize 2018.

- Ans
- 1. Nadia Murad
 - 2. Kazuo Ishiguro
 - 3. James P. Allison
 - 4. Donna Strickland

Question ID : 9895802556
Chosen Option : 1

Q.3
8 Which Indian cricketer topped the MRF Tyres ICC Test Player Rankings at the year-end after 2018?

- Ans
- 1. Virat Kohli
 - 2. Ajinkya Rahane
 - 3. Cheteshwar Pujara
 - 4. Ravindra Jadeja

Question ID : 9895802553
Chosen Option : 1

Q.3
9 Which of the following turns Blue litmus Red?

- Ans
- 1. Vinegar
 - 2. Lime Water
 - 3. Baking Soda
 - 4. Milk

Question ID : 9895802566

Chosen Option : 4

Q.4
0 Bhimbetka, a world heritage site, is known for:

- Ans
- 1. Ashokan Pillar
 - 2. prehistoric rock shelters
 - 3. monolithic temples
 - 4. Buddhist stupas

Question ID : 9895802549

Chosen Option : 3

Q.4
1 Which of the following statements is NOT correct about myopia?

- Ans
- 1. The vision may be corrected with the help of concave lens.
 - 2. It is also known as near sightedness.
 - 3.
In the affected eye, the image of a distant object is formed beyond the retina.
 - 4. The person affected by it cannot see beyond few metres.

Question ID : 9895802563

Chosen Option : 3

Q.4
2 What is 'Bringa' in Orissa?

- Ans
- 1. A village known for diamond mines
 - 2. A stone weapon used by the aboriginals
 - 3. An edible oil used by the aboriginals
 - 4. A local name of 'slash and burn' agriculture

Question ID : 9895802568

Chosen Option : 4

Q.4
3 Which of the following options is also termed as the third-tier of democracy in India?

- Ans
- 1. State government
 - 2. Union Territory governments
 - 3. Local-self government
 - 4. Supreme Court

Question ID : 9895802561

Chosen Option : 3

Q.4
4 Which of the following rulers built the mosque called 'Adhai-din-ka-Jhonpra'?

Ans

- 1. Balban
- 2. Abraham Lodi
- 3. Iltutmish
- 4. Qutub-ud-Din-Aibak

Question ID : 9895802550
Chosen Option : 4

Q.4
5 Which of the following constitutional amendments provided for the Right to Education?

- Ans
- 1. 88th amendment
 - 2. 89th amendment
 - 3. 87th amendment
 - 4. 86th amendment

Question ID : 9895802562
Chosen Option : 4

Q.4
6 Which of the following institutions is responsible for regulating the formal sources of credit in India?

- Ans
- 1. RBI
 - 2. TRAI
 - 3. NABARD
 - 4. IRDA

Question ID : 9895802559
Chosen Option : 1

Q.4
7 Which of the following organizations received the Maulana Abul Kalam Azad (MAKA) Trophy 2017-18?

- Ans
- 1. JSW Sports
 - 2. Isha Outreach
 - 3. Rashtriya Ispat Nigam Limited
 - 4. Guru Nanak Dev University

Question ID : 9895802552
Chosen Option : 1

Q.4
8 The Economic Survey of India is published by:

- Ans
- 1. Department of Financial Services
 - 2. Department of Economic Affairs
 - 3. Department of Revenue
 - 4. Department of Public Expenditure

Question ID : 9895802557

Chosen Option : 2

Q.4
9 During British rule in India, 'gomastha' was:

Ans 1.

a paid servant to supervise weavers, collect supplies, and examine the quality of cloth

2. an Indian soldier appointed as the in-charge of a cavalry
 3. a village-level official in the revenue-department
 4. an Indian official in the intelligence department

Question ID : 9895802571

Chosen Option : 3

Q.5
0 Which of the following rivers forms the famous Dhuadhar falls?

Ans 1. Narmada

2. Kali Sind
 3. Chambal
 4. Tapi

Question ID : 9895802569

Chosen Option : 3

Q.5
1 A sum of ₹ 8250 gives simple interest of ₹ 2475 in 5 years. What will be the rate of interest per annum?

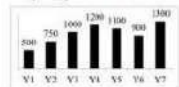
Ans 1. 7.5%

2. 8%
 3. 6%
 4. 10%

Question ID : 9895804347

Chosen Option : 3

Q.5
2 The bar chart given below shows the total exports (in ₹ 1000 crores) of a country for 7 consecutive years Y1, Y2, Y3, Y4, Y5, Y6 and Y7.



What is the average exports from years Y1 to Y7?

Ans 1. 931.45

2. 886.19
 3. 964.28
 4. 847.87

Question ID : 9895804357

Chosen Option : 3

Q.5
3 The volume of a right circular cone is equal to the volume of that right circular cylinder whose height is 27 cm and diameter of its base is 30 cm. If the height of the cone is 25 cm, then what will be the diameter of its base?

Ans 1.

- 2. 54 cm
- 3. 27 cm
- 4. 35 cm

Question ID : 9895804353
Chosen Option : 3

Q.5 Out of 100 articles, 25 articles were sold at 25% profit and the remaining articles were sold at 25% loss. What will be the total loss percentage?

- Ans
- 1. 15
 - 2. 12.5
 - 3. 20
 - 4. 10

Question ID : 9895804343
Chosen Option : 2

Q.5 40 mechanics can repair a bike in 56 days. In how many days 32 mechanics will do the same work?

- Ans
- 1. 60 days
 - 2. 56 days
 - 3. 80 days
 - 4. 70 days

Question ID : 9895804350
Chosen Option : 4

Q.5 The average of 23, 27, 29, 36, 47 and x is 35. What is the value of x?

- Ans
- 1. 45
 - 2. 52
 - 3. 48
 - 4. 39

Question ID : 9895804338
Chosen Option : 3

Q.5 Tap K can fill a tank in 8 hours and tap L can fill the same tank in 20 hours. In how many hours both tap K and L together can fill the same tank?

- Ans
- 1. 20/3 hours
 - 2. 60/11 hours
 - 3. 18/5 hours
 - 4. 40/7 hours

Question ID : 9895804349
Chosen Option : 4

8 Selling price of first article is ₹ 960 and cost price of second article is ₹ 960. If there is a profit of 20% on first article and loss of 20% on second article, then, what will be the total loss?

- Ans
- 1. ₹ 36
 - 2. ₹ 24
 - 3. ₹ 20
 - 4. ₹ 32

Question ID : 9895804342

Chosen Option : 4

Q.5 Neeraj covers two distances of 10 km and 20 km in 1 hour and 5 hours respectively. What will be the average speed of

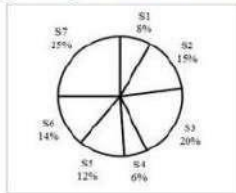
9 Neeraj for the whole journey?

- Ans
- 1. 4 km/hr
 - 2. 7 km/hr
 - 3. 5 km/hr
 - 4. 6 km/hr

Question ID : 9895804351

Chosen Option : 2

Q.6 The pie chart given below shows the annual snowfall received by 7 states of a country. The snowfall is shown as a percentage of total annual snowfall of the country.



If the annual snowfall received by the country is 700 cm. What is the difference in the annual snowfalls of S3 and S2?

- Ans
- 1. 42 cm
 - 2. 7 cm
 - 3. Cannot be determined
 - 4. 35 cm

Question ID : 9895804356

Chosen Option : 4

Q.6
1 What is the value of $\left(2000 \div \frac{1}{2} \text{ of } \frac{25}{2} \times \frac{5}{2} \text{ of } \frac{4}{25} - 5\right)$?

- Ans
- 1. 121
 - 2. 123
 - 3. 122
 - 4. 126

Question ID : 9895804335

Chosen Option : 4

Q.6
2 A motorcycle is moving at the speed of 25 km/hr and its speed is increased by 7 km/hr at the end of each hour. How much time it will take to cover a distance of 225 km?

- Ans 1. 11/2 hr
 2. 7 hr
 3. 13/2 hr
 4. 6 hr

Question ID : 9895804352
Chosen Option : 1

Q.6
3 What is the mode of the given data?
21, 22, 23, 23, 24, 21, 22, 23, 21, 23, 24, 23, 21, 23

- Ans 1. 23
 2. 21
 3. 22
 4. 24

Question ID : 9895804340
Chosen Option : 2

Q.6
4 A sum of ₹ 10500 becomes ₹ 17745 in 2 years at the rate of compound interest. If the interest is compounded annually, then what will be the rate of interest?

- Ans 1. 40%
 2. 30%
 3. 25%
 4. 20%

Question ID : 9895804348
Chosen Option : 2

Q.6
5 The average monthly salary of 30 employees and 5 managers is ₹ 80000. One manager with salary ₹ 180000 is replaced by a new manager. If the average monthly salary now becomes ₹ 78500, then what is the monthly salary of the new manager?

- Ans 1. ₹ 142500
 2. ₹ 132000
 3. ₹ 127500
 4. ₹ 154500

Question ID : 9895804337
Chosen Option : 1

Q.6
6 Height of a right circular cone is 8 cm. If diameter of its base is 12 cm, then what will be the curved surface area of the cone?

- Ans 1. $1056/7 \text{ cm}^2$
 2. $1320/7 \text{ cm}^2$
 3. $1440/7 \text{ cm}^2$
 4. $2112/7 \text{ cm}^2$

Question ID : 9895804354
Chosen Option : 2

Q.6 The ratio of the areas of two triangles is 1 : 2 and the ratio of their bases is 3 : 4. What will be the ratio of their height?
7

- Ans
- 1. 1 : 3
 - 2. 4 : 3
 - 3. 2 : 1
 - 4. 2 : 3

Question ID : 9895804355
Chosen Option : 4

Q.6 A bag has ₹ 840 in the denomination of ₹ 1, ₹ 2 and ₹ 5 coins. ₹ 1, ₹ 2 and ₹ 5 coins are in the ratio of 8 : 1 : 5. How
8 many coins of ₹ 5 are in the bag?

- Ans
- 1. 60
 - 2. 24
 - 3. 600
 - 4. 120

Question ID : 9895804345
Chosen Option : 4

Q.6
9 What is the value of $\left(11 \div 4 - \frac{2}{3} \text{ of } \frac{9}{8} + 11\right)$?

- Ans
- 1. 13
 - 2. 11
 - 3. 15
 - 4. 17

Question ID : 9895804336
Chosen Option : 1

Q.7 The Least Common Multiple and Highest common Factor of two numbers are 30 and 5 respectively. If their sum is 25,
0 then what will be the difference of these two numbers?

- Ans
- 1. 15
 - 2. 10
 - 3. 25
 - 4. 5

Question ID : 9895804334
Chosen Option : 4

Q.7 A shopkeeper sells a cooler at a discount of 15%. If he gives a discount of 19%, then he earns ₹ 332 less. What will be
1 the marked price of the cooler?


- Ans
- 1. ₹ 8100
 - 2. ₹ 8300
 - 3. ₹ 8700

4. ₹ 8200

Question ID : 9895804339

Chosen Option : 2

Q.7 The bar chart given below shows the total exports (in ₹ 1000 crores) of a country for 7 consecutive years Y1, Y2, Y3, Y4, Y5, Y6 and Y7.



What is the ratio of the exports of year with lowest exports and the year with second highest exports?

- Ans 1. 9 : 12
 2. 5 : 12
 3. 9 : 13
 4. 5 : 11

Question ID : 9895804358

Chosen Option : 2

Q.7 If X is 80% more than Y , then Y is how much percentage less than X ?

- Ans 1. 61.33%
 2. 80%
 3. 33.33%
 4. 44.44%

Question ID : 9895804341

Chosen Option : 4

Q.7 P, Q and R invest sum in the ratio of 7 : 4 : 9 respectively. If they earned total profit of ₹ 6680 at the end of year, then what is the total share of P and Q together?

- Ans 1. ₹ 4868
 2. ₹ 4254
 3. ₹ 4124
 4. ₹ 3674

Question ID : 9895804346

Chosen Option : 4

Q.7 K, L and M invest sum in the ratio of 15 : 20 : 27 respectively. If they earned total profit of ₹ 10230 at the end of year, then what is the difference between share of K and L?

- Ans 1. ₹ 1155
 2. ₹ 1275
 3. ₹ 1980
 4. ₹ 825

Question ID : 9895804344

Chosen Option : 4

Q.1 Select the most appropriate meaning of the underlined idiom in the given sentence.

My views are totally in harmony with my brother's views.

- Ans
- 1. according to
 - 2. in favor of
 - 3. different from
 - 4. in agreement with

Question ID : 9895804238
Chosen Option : 4

Q.2 Select the most appropriate ANTONYM of the given word.

ATTRACTED

- Ans
- 1. Repelled
 - 2. Enchanted
 - 3. Transformed
 - 4. Disturbed

Question ID : 9895804236
Chosen Option : 1

Q.3 Select the most appropriate word to fill in the blank.

My sister _____ a cat and brought it home.

- Ans
- 1. assumed
 - 2. adapted
 - 3. adopted
 - 4. approved

Question ID : 9895804244
Chosen Option : 3

Q.4 Select the most appropriate option to substitute the underlined segment in the given sentence. If there is no need to substitute it, select No improvement.

The sound of the sea waves became gradually weaker over the time.

- Ans
- 1. sounds of the sea wave
 - 2. sound from sea waves
 - 3. No improvement
 - 4. sound with the sea waves

Question ID : 9895804252
Chosen Option : 3

Q.5 Select the most appropriate option to substitute the underlined segment in the given sentence. If there is no need to substitute it, select No improvement.

Sivagami longed to touch the chisel but her grandfather chase her away.

- Ans
- 1. chased it away
 - 2. chased her away
 - 3. No improvement
 - 4. had chased them away

Question ID : 9895804251
Chosen Option : 2

Q.6 Identify the segment in the sentence which contains the grammatical error from the given options.

I'm sorry, but I don't agree with which you just said.

- Ans
- 1. I'm sorry
 - 2. with which
 - 3. just said
 - 4. don't agree

Question ID : 9895804247
Chosen Option : 2

Q.7 Select the most appropriate synonym of the given word.

THRIVE

- Ans
- 1. Prosper
 - 2. Promote
 - 3. Foster
 - 4. Progress

Question ID : 9895804233
Chosen Option : 3

Q.8 Select the word which means the same as the group of words given.

An act that makes you feel morally bad or ashamed.

- Ans
- 1. Displeased
 - 2. Irrational
 - 3. Disgraceful
 - 4. Ignorant

Question ID : 9895804242
Chosen Option : 3

Q.9

Select the most appropriate meaning of the given idiom.

Bone of contention

- Ans
- 1. A cause of failure
 - 2. A matter of contentment
 - 3. A highly irritable person
 - 4. A subject of dispute

Question ID : 9895804237
Chosen Option : 4

Q.1
0 Fill in the blanks with the most appropriate words.

Once the mother duck jumped _____ the pond, the ducklings followed suit.

- Ans
- 1. over
 - 2. in
 - 3. under
 - 4. into

Question ID : 9895804248
Chosen Option : 4

Q.1
1 Select the correctly spelt word.

- Ans
- 1. Thoroughfare
 - 2. Thoroughfair
 - 3. Thorowfare
 - 4. Throughfare

Question ID : 9895804240
Chosen Option : 4

Q.1
2 Select the most appropriate option to substitute the underlined segment in the given sentence. If there is no need to substitute it, select No improvement.

The ticking of the clock was the only sound to hear.

- Ans
- 1. in hearing
 - 2. No improvement
 - 3. to hear with
 - 4. to be heard

Question ID : 9895804250
Chosen Option : 4

Comprehension:

In the following passage some words have been deleted. Fill in the blanks with the help of the alternatives given. Select the most appropriate option for each number.

The trees had lost most of their leaves and their (1) _____ figures were clear against the grey sky. Bella looked up at them and could see birds (2) _____ with difficulty, (3) _____ to keep themselves in place while the wind tried to blow them (4) _____. She was walking against the wind and trying hard to push herself ahead. She resisted and strode (5) _____

SubQuestion No : 13

Q.1
3 Fill in blank (1) with the most appropriate option.

- Ans
- 1. bared
 - 2. dreary
 - 3. parched
 - 4. dried

Question ID : 9895804254
Chosen Option : 4

Comprehension:

In the following passage some words have been deleted. Fill in the blanks with the help of the alternatives given. Select the most appropriate option for each number.

The trees had lost most of their leaves and their (1) _____ figures were clear against the grey sky. Bella looked up at them and could see birds (2) _____ with difficulty, (3) _____ to keep themselves in place while the wind tried to blow them (4) _____. She was walking against the wind and trying hard to push herself ahead. She resisted and strode (5) _____

SubQuestion No : 14

Q.1
4 Fill in blank (2) with the most appropriate option.

- Ans
- 1. perching
 - 2. punching
 - 3. pouncing
 - 4. parching

Question ID : 9895804255
Chosen Option : 4

Comprehension:

In the following passage some words have been deleted. Fill in the blanks with the help of the alternatives given. Select the most appropriate option for each number.

The trees had lost most of their leaves and their (1) _____ figures were clear against the grey sky. Bella looked up at them and could see birds (2) _____ with difficulty, (3) _____ to keep themselves in place while the wind tried to blow them (4) _____. She was walking against the wind and trying hard to push herself ahead. She resisted and strode (5) _____

SubQuestion No : 15

Q.1
5 Fill in blank (3) with the most appropriate option.

- Ans
- 1. struggling
 - 2. sleeping
 - 3. sliding
 - 4. surviving

Question ID : 9895804256
Chosen Option : 1

Comprehension:

In the following passage some words have been deleted. Fill in the blanks with the help of the alternatives given. Select the most appropriate option for each number.

The trees had lost most of their leaves and their (1) _____ figures were clear against the grey sky. Bella looked up at them and could see birds (2) _____ with difficulty, (3) _____ to keep themselves in place while the wind tried to blow them (4) _____. She was walking against the wind and trying hard to push herself ahead. She resisted and strode (5) _____

SubQuestion No : 16

Q.1
6 Fill in blank (4) with the most appropriate option.

- Ans
- 1. out
 - 2. away
 - 3. up
 - 4. aside

Question ID : 9895804257
Chosen Option : 2

Comprehension:

In the following passage some words have been deleted. Fill in the blanks with the help of the alternatives given. Select the most appropriate option for each number.

The trees had lost most of their leaves and their (1) _____ figures were clear against the grey sky. Bella looked up at them and could see birds (2) _____ with difficulty, (3) _____ to keep themselves in place while the wind tried to blow them (4) _____. She was walking against the wind and trying hard to push herself ahead. She resisted and strode (5) _____.

SubQuestion No : 17

Q.1
7 Fill in blank (5) with the most appropriate option.

- Ans 1. on
 2. by
 3. up
 4. in

Question ID : 9895804258
Chosen Option : 2

Q.1
8 Identify the segment in the sentence which contains the grammatical error from the given options.

As far the eye could reach, nothing could be seen except the ruined columns of an old building.

- Ans 1. could reach
 2. As far the eye
 3. except the
 4. nothing could be

Question ID : 9895804246
Chosen Option : 1

Q.1
9 Select the word which means the same as the group of words given.

That which cannot be wrong

- Ans 1. Irrefutable
 2. Inaccurate
 3. Infallible
 4. Inevitable

Question ID : 9895804241
Chosen Option : 3

Q.2
0 Select the most appropriate antonym of the given word.

BENEVOLENT

Ans

- 1. Dull
- 2. Merciless
- 3. Friendly
- 4. Injurious

Question ID : 9895804235
Chosen Option : 2

Q.2
1 Select the most appropriate word to fill in the blank.

His success in the competitive examination gave him a major _____ in his career.

- Ans
- 1. break out
 - 2. breakthrough
 - 3. break up
 - 4. breakdown

Question ID : 9895804243
Chosen Option : 2

Q.2
2 Identify the segment in the sentence which contains the grammatical error from the given options.

She always gets the better in quarrels whether it is with girls or boys.

- Ans
- 1. better in
 - 2. gets the
 - 3. it is with
 - 4. She always

Question ID : 9895804245
Chosen Option : 2

Q.2
3 Select the correctly spelt word.

- Ans
- 1. Kindergarden
 - 2. Kindergarten
 - 3. Kindargarten
 - 4. Kindergardan

Question ID : 9895804239
Chosen Option : 1

Q.2
4 Fill in the blank with the most appropriate option.

_____ in the first attempt, he did not try again.

- Ans
- 1.
 - 2. Having failed

3. Being failed

4. Having fail

Question ID : 9895804249
Chosen Option : 2

Q.2 Select the most appropriate synonym of the given word.

MORALE

Ans 1. Appearance

2. Attitude

3. Self-confidence

4. Reputation

Question ID : 9895804234
Chosen Option : 4

Section : Hindi Language

Q.1 रिक्त स्थान को भरने के लिए उपयुक्त शब्द का चयन करें।

ज्वर के कारण मुझे चलने पर _____ हो रही है।

Ans 1. थकावट

2. हँसी

3. खुशी

4. दुखी

Question ID : 9895803652
Chosen Option : --

Q.2 दिये गये वाक्यांश के लिए एक शब्द चुनिए।

जिसका कोई नाथ न हो

Ans 1. कुनाथ

2. अनाथ

3. हजारीनाथ

4. सनाथ

Question ID : 9895803669
Chosen Option : --

Q.3 सही वर्तनी वाले शब्द का चयन करें।

Ans

1. हिंदुत्व
2. हिंदूत्व
3. हिनदुत्व
4. हीन्दूत्व

Question ID : 9895803671
Chosen Option : --

Q.4 रिक्त स्थान को भरने के लिए उपयुक्त शब्द का चयन करें।

दादा जी को बागवानी में _____ है।

- Ans
1. शोक
 2. प्रश्न
 3. रुचि
 4. नियम

Question ID : 9895803655
Chosen Option : --

Q.5 दिए गए वाक्य में रेखांकित खंड को प्रतिस्थापित करने के लिए

उपयुक्त विकल्प का चयन करें।

मेरी पेंटिंग दस हजारों में बिक गई।

- Ans
1. दसों हजारों में बिक गई।
 2. दस हजार में बिक गई।
 3. दस हजार में बिक गए।
 4. दसों हजार में बिक गई।

Question ID : 9895803650
Chosen Option : --

Q.6 दिए गए शब्द के पर्यायवाची शब्द का चयन करें।

समुद्र

- Ans
1. मेघ
 2. परिधि
 3. नीरधि
 4. परिमाण

Question ID : 9895803664
Chosen Option : --

Q.7 निम्नलिखित में से उस विकल्प का चयन करें जो 'कुँएँ का मेंढक' मुहाबरे का अर्थ व्यक्त करता है।

Ans

1. कुँएँ के अंदर रहने वाला मेंढक
2. मूर्ख
3. ज्ञानी
4. सीमित ज्ञान वाला

Question ID : 9895803666
Chosen Option : --

Q.8 दिये गये वाक्यांश के लिए एक शब्द चुनिए।

जिसे जाना न जा सके

Ans

1. जानशील
2. जानोदय
3. अज्ञेय
4. जिज्ञासु

Question ID : 9895803668
Chosen Option : --

Q.9 दिए गए शब्द का विलोम चुनें।

उदय

Ans

1. उत्तर
2. वाचाल
3. अस्त
4. निरस्त

Question ID : 9895803663
Chosen Option : --

Comprehension:

दिए गए अनुच्छेद में कुछ शब्द हटा दिए गए हैं। दिए गए विकल्पों की सहायता से रिक्त स्थान भरें। प्रत्येक संख्या के लिए उपयुक्त विकल्प का चयन करें।

सत्य भाषण से मनुष्य की आत्मा _____ (1) होती है। उसके मन को सुख और _____ (2) प्राप्त होती है। सत्यवादी को कभी यह भय नहीं रहता कि यदि उसकी _____ (3) खुल गई तो क्या होगा ? उसे मानसिक शांति रहती है। इसके विपरीत झूठ बोलने वाले व्यक्ति की समाज में _____ (4) होती रहती है। असत्यवादी व्यक्ति अपने स्वभाव के कारण कभी _____ (5) नहीं बोल पाता।

SubQuestion No : 10

Q.1
0 गद्यांश में संकेतित रिक्त स्थान (1) के लिए उपयुक्त शब्द होगा -

- Ans 1. बलवान
 2. दुर्बल
 3. समाज
 4. निन्दा

Question ID : 9895803657

Chosen Option : --

Comprehension:

दिए गए अनुच्छेद में कुछ शब्द हटा दिए गए हैं। दिए गए विकल्पों की सहायता से रिक्त स्थान भरें। प्रत्येक संख्या के लिए उपयुक्त विकल्प का चयन करें।

सत्य भाषण से मनुष्य की आत्मा _____ (1) होती है। उसके मन को सुख और _____ (2) प्राप्त होती है। सत्यवादी को कभी यह भय नहीं रहता कि यदि उसकी _____ (3) खुल गई तो क्या होगा ? उसे मानसिक शांति रहती है। इसके विपरीत झूठ बोलने वाले व्यक्ति की समाज में _____ (4) होती रहती है। असत्यवादी व्यक्ति अपने स्वभाव के कारण कभी _____ (5) नहीं बोल पाता।

SubQuestion No : 11

Q.1
1 गद्यांश में संकेतित रिक्त स्थान (2) के लिए उपयुक्त शब्द होगा -

- Ans 1. बड़ाई
 2. शांति
 3. कमी
 4. अशांति

Question ID : 9895803658

Comprehension:

दिए गए अनुच्छेद में कुछ शब्द हटा दिए गए हैं। दिए गए विकल्पों की सहायता से रिक्त स्थान भरें। प्रत्येक संख्या के लिए उपयुक्त विकल्प का चयन करें।

सत्य भाषण से मनुष्य की आत्मा _____ (1) होती है। उसके मन को सुख और _____ (2) प्राप्त होती है। सत्यवादी को कभी यह भय नहीं रहता कि यदि उसकी _____ (3) खुल गई तो क्या होगा ? उसे मानसिक शांति रहती है। इसके विपरीत झूठ बोलने वाले व्यक्ति की समाज में _____ (4) होती रहती है। असत्यवादी व्यक्ति अपने स्वभाव के कारण कभी _____ (5) नहीं बोल पाता।

SubQuestion No : 12

Q.1
2 गद्यांश में संकेतित रिक्त स्थान (3) के लिए उपयुक्त शब्द होगा -

- Ans 1. गठरी
 2. लकड़ी
 3. पोल
 4. बरतन

Question ID : 9895803659

Chosen Option : --

Comprehension:

दिए गए अनुच्छेद में कुछ शब्द हटा दिए गए हैं। दिए गए विकल्पों की सहायता से रिक्त स्थान भरें। प्रत्येक संख्या के लिए उपयुक्त विकल्प का चयन करें।

सत्य भाषण से मनुष्य की आत्मा _____ (1) होती है। उसके मन को सुख और _____ (2) प्राप्त होती है। सत्यवादी को कभी यह भय नहीं रहता कि यदि उसकी _____ (3) खुल गई तो क्या होगा ? उसे मानसिक शांति रहती है। इसके विपरीत झूठ बोलने वाले व्यक्ति की समाज में _____ (4) होती रहती है। असत्यवादी व्यक्ति अपने स्वभाव के कारण कभी _____ (5) नहीं बोल पाता।

SubQuestion No : 13

Q.1
3 गद्यांश में संकेतित रिक्त स्थान (4) के लिए उपयुक्त शब्द होगा -

- Ans 1. पूजा
 2. प्रशंसा
 3. मजाक

✓ 4. निन्दा

Question ID : 9895803660
Chosen Option : --

Comprehension:

दिए गए अनुच्छेद में कुछ शब्द हटा दिए गए हैं। दिए गए विकल्पों की सहायता से रिक्त स्थान भरें। प्रत्येक संख्या के लिए उपयुक्त विकल्प का चयन करें।

सत्य भाषण से मनुष्य की आत्मा _____ (1) होती है। उसके मन को सुख और _____ (2) प्राप्त होती है। सत्यवादी को कभी यह भय नहीं रहता कि यदि उसकी _____ (3) खुल गई तो क्या होगा ? उसे मानसिक शांति रहती है। इसके विपरीत झूठ बोलने वाले व्यक्ति की समाज में _____ (4) होती रहती है। असत्यवादी व्यक्ति अपने स्वभाव के कारण कभी _____ (5) नहीं बोल पाता।

SubQuestion No : 14

Q.1
4 गद्यांश में संकेतित रिक्त स्थान (5) के लिए उपयुक्त शब्द होगा -

- Ans
- 1. घटिया
 - 2. सत्य
 - 3. नीचा
 - 4. बढ़िया

Question ID : 9895803661
Chosen Option : --

Q.1
5 रिक्त स्थान को भरने के लिए उपयुक्त शब्द का चयन करें।

_____ चैन से रहना चाहता हूँ।

- Ans
- 1. मैं
 - 2. वह
 - 3. आप
 - 4. तुम

Question ID : 9895803653
Chosen Option : --

Q.1
6 रिक्त स्थान को भरने के लिए उपयुक्त शब्द का चयन करें।

_____ ने अपना घोंसला बनाया।

- Ans
- 1.

- 2. शेर
- 3. कबूतर
- 4. हाथी

Question ID : 9895803654
Chosen Option : --

Q.1 निम्नलिखित में से उस विकल्प का चयन करें जो ' तलवार सिर पर लटकी रहना ' मुहाबरे का अर्थ व्यक्त करता है।

- Ans
- 1. भयंकर खतरा बने रहना
 - 2. तलवार से खतरा हटाना
 - 3. तलवार साथ लेकर चलना
 - 4. सिर के ऊपर तलवार लटकाकर घूमना

Question ID : 9895803667
Chosen Option : --

Q.1 दिए गए वाक्य का वह भाग ज्ञात करें जिसमें कोई त्रुटि है।

वास्तव में ईश्वर ने सभी को स्वतन्त्रा उत्पन्न किया है।

- Ans
- 1. ईश्वर ने
 - 2. स्वतन्त्रा उत्पन्न किया है।
 - 3. सभी को
 - 4. वास्तव में

Question ID : 9895803646
Chosen Option : --

Q.1 दिए गए वाक्य का वह भाग ज्ञात करें जिसमें कोई त्रुटि है।

वृक्ष पूजन का हमारे जीवन का विशेष स्थान नहीं रहा।

- Ans
- 1. हमारे जीवन का
 - 2. नहीं रहा।
 - 3. वृक्ष पूजन का
 - 4. विशेष स्थान

Question ID : 9895803647
Chosen Option : --

Q.2
0

दिए गए वाक्य में रेखांकित खंड को प्रतिस्थापित करने के लिए

उपयुक्त विकल्प का चयन करें।

कई लोग उसके पीट रहे थे, वह अपना बचाव नहीं कर पा रहा था।

- Ans
- 1. उसपर पीट रहे थे,
 - 2. उसे पीट रहे थे,
 - 3. उसे पीट रहा था,
 - 4. उससे पीट रहे थे,

Question ID : 9895803651

Chosen Option : --

Q.2
1 दिए गए शब्द का विलोम चुनें।

परोक्ष

- Ans
- 1. नवागत
 - 2. पाक्षिक
 - 3. जिज्ञासु
 - 4. प्रत्यक्ष

Question ID : 9895803662

Chosen Option : --

Q.2
2 सही वर्तनी वाले शब्द का चयन करें।

- Ans
- 1. संसकार
 - 2. संस्कार
 - 3. संशकार
 - 4. संष्कार

Question ID : 9895803670

Chosen Option : --

Q.3
3 दिए गए शब्द के पर्यायवाची शब्द का चयन करें।

बादल

- Ans
- 1. घन
 - 2. घर
 - 3. आकाश
 - 4. घट

Q.2
4 दिए गए वाक्य का वह भाग ज्ञात करें जिसमें कोई त्रुटि है।

लिखित और मौखिक भाषा में सबसे बड़ा अंतर यह है कि लिखित भाषा अनुशासन की माँग करता है।

Ans

1. यह है कि
- ✗ 2. सबसे बड़ा अंतर
- ✓ 3. लिखित और मौखिक भाषा में
4. लिखित भाषा अनुशासन की माँग करता है।

Q.2
5 दिए गए वाक्य में रेखांकित खंड को प्रतिस्थापित करने के लिए उपयुक्त विकल्प का चयन करें।

चाँदी की हथकड़ी काला पड़ जाती है।

Ans

1. हथकड़ी कालियाँ पड़ जाती है।
- ✗ 2. हथकड़ी काली पड़ जाता है।
- ✗ 3. हथकड़ी काला पड़ जाता है।
- ✗ 4. हथकड़ी काली पड़ जाती है।

Constable (GD) in CAPFs, NIA, SSF and Rifleman (GD) in Assam Rifles Examination, 2018

Roll No. :	
Registration No.	
Name :	
Exam Venue :	iON Digital Zone iDZ 2 Chinamushidiwada
Exam Time :	12:30 PM - 2:00 PM
Exam Date :	13/02/2019

Section : General Section

Q.1 In a certain code, ENGINEER is written as REENENG. How will PRODUCER be written in that code?

- Ans
- 1. RECDUPRO
 - 2. RECUDORP
 - 3. RECDVPRO
 - 4. RECUDORP

Question ID : 9895804723
Chosen Option : 1

Q.2 A square transparent sheet with a pattern is given. How will the pattern appear when the transparent sheet is folded along the dotted line?



- Ans
- 1.
 - 2.
 - 3.
 - 4.

Question ID : 9895804740
Chosen Option : --

Q.3 Select the option that will correctly replace the question mark (?) in the series.

PKZ, NMX, LOV, JQT, ?

- Ans
- 1. HSR
 - 2. ISO
 - 3. HTP
 - 4. HST

Question ID : 9895804717
Chosen Option : 1

Q.4 The statements below are followed by two conclusions labeled I and II. Assuming that the information in the statements is true, even if it appears at variance with generally established facts, decide which conclusion(s) logically and definitely follow(s) from the information given in the statements.

Statements:

- 1) All gypsies are webs.
- 2) All webs are nest.

Conclusion:

- I. All nests are gypsies.
- II. Some nests are gypsies.

- Ans** 1. Both conclusions follow.
 2. Only conclusion II follows.
 3. Only conclusion I follows.
 4. Either conclusion I or conclusion II follows.

Question ID : 9895804728
Chosen Option : 3

Q.5 Select the option that is related to the third number in the same way as the second number is related to the first number.

17: 289:: 23: ?

- Ans** 1. 529
 2. 625
 3. 144
 4. 169

Question ID : 9895804732
Chosen Option : 1

Q.6 Select the option that will correctly replace the question mark (?) in the series.

10, 11, 19, 46, ?

- Ans** 1. 110
 2. 105
 3. 82
 4. 77

Question ID : 9895804731
Chosen Option : --

Q.7 Find out the two signs to be interchanged to make the following equation correct.

$17 + 28 \times 4 - 5 \div 3 = 9$

- Ans** 1. - and \div
 2. + and -
 3. \times and \div
 4. - and \times

Question ID : 9895804735
Chosen Option : --

Q.8

Choose the odd one out of the given options.

- Ans
- 1. Garlic
 - 2. Onion
 - 3. Mustard
 - 4. Ginger

Question ID : 9895804719
Chosen Option : 3

Q.9 Choose the option that most closely resembles the mirror image of the given word when mirror is placed at right side.

CLAMBER

- Ans
- 1. **REBMAJQ**
 - 2. **REBWATQ**
 - 3. **REBWAJQ**
 - 4. **REBWAJQ**

Question ID : 9895804739
Chosen Option : 1

Q.1 Select the option that is related to the third term in the same way as the second term is related to the first term.

DFH: HLP:: EGI : ?

- Ans
- 1. JMP
 - 2. JNR
 - 3. JMR
 - 4. JNP

Question ID : 9895804722
Chosen Option : 2

Q.1 Choose the odd number out of the given options.

- Ans
- 1. 373
 - 2. 317
 - 3. 247
 - 4. 319

Question ID : 9895804733
Chosen Option : 3

Q.1 Choose the option in which the figure marked 'X' is embedded. (Rotation is not allowed)



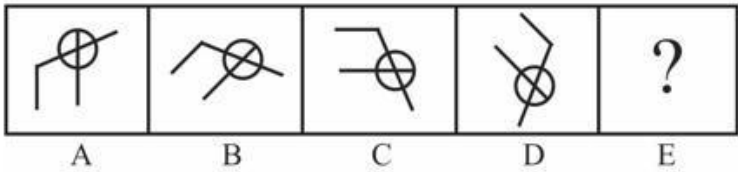
X

- Ans
- 1.

- 2.
- 3.
- 4.

Question ID : 9895804738
Chosen Option : 3

Q.1 ₃ Choose the option that would follow next in the given figure series.



Ans

- 1.
- 2.
- 3.
- 4.

Question ID : 9895804736
Chosen Option : 3

Q.1 ₄ In a certain code, PENCIL is written as 59. How will ERASER be written in that code?

- 1. 66
- 2. 55
- 3. 65
- 4. 54

Question ID : 9895804724
Chosen Option : 3

Select the option that will correctly replace the question mark (?) in the series.

4, 20, 36, 52, ?

- Ans
- 1. 70
 - 2. 69
 - 3. 67
 - 4. 68

Question ID : 9895804730
Chosen Option : 4

Q.1
6 Seven friends O, P, Q, R, S, T and U are watching a movie sitting in a row. S is sitting at one extreme end. Q is sitting second to the right of S. P is sitting between O and Q. U is not sitting at any extreme end. R is sitting to the left of T. Who is sitting to the immediate left of P?

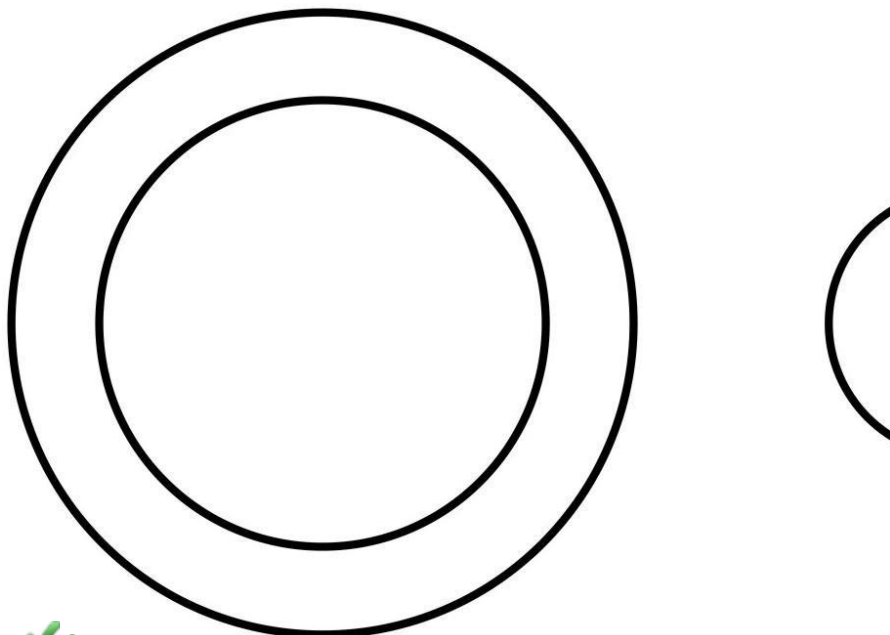
- Ans
- 1. O
 - 2. U
 - 3. R
 - 4. Q


Question ID : 9895804725
Chosen Option : 4

Q.1
7 Select the Venn diagram that best represents the given set of classes.

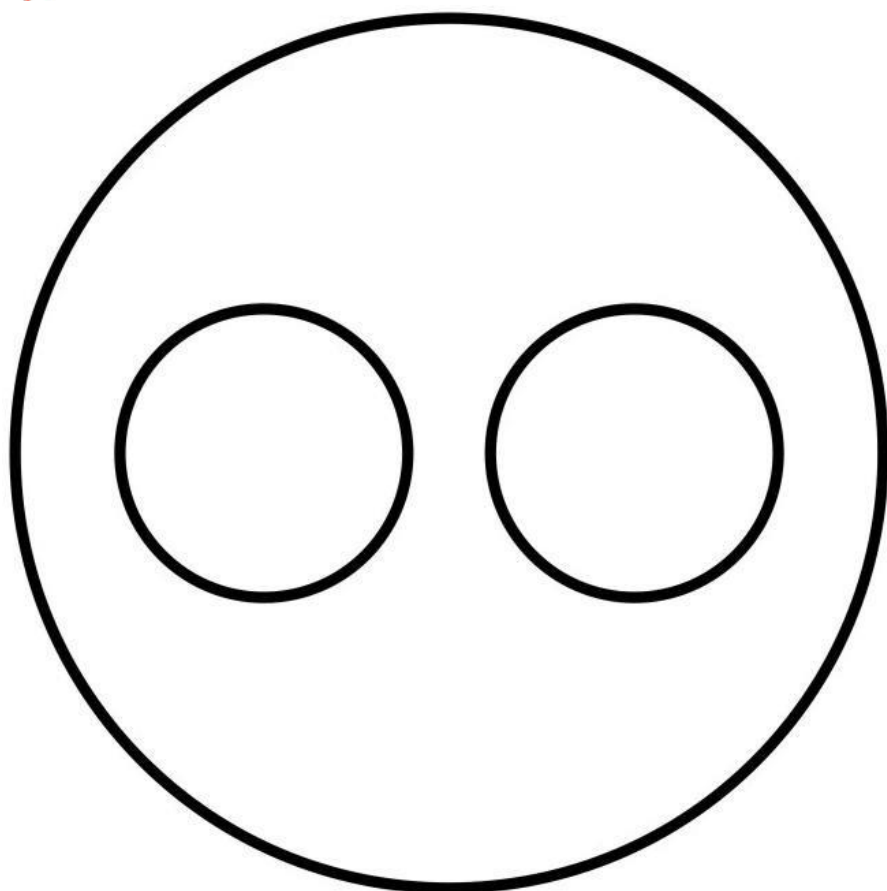
Trivandrum, India, Kerala

- Ans
- 1.

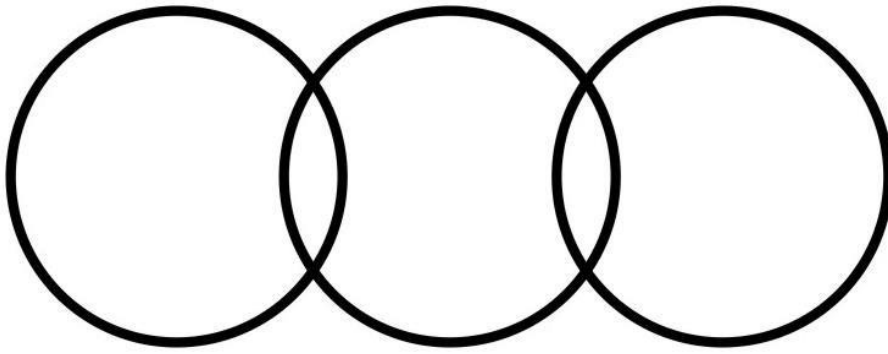




X 3.



X 4.



Question ID : 9895804741
Chosen Option : 2

Q.1 Select the option that is related to the third term in the same way as the second term is related to the first term.

8

Dissipate: Squander:: Alight : ?

- Ans 1. Prohibition
 2. Descend
 3. Scarcity
 4. Illusion

Question ID : 9895804720
Chosen Option : 2

Q.1 Select the option that will correctly replace the question mark (?) in the given pattern.

9

13	23	?
3	4	6
39	92	66

- Ans 1. 13
 2. 7
 3. 11
 4. 9

Question ID : 9895804734
Chosen Option : 1

Q.2 Choose the odd one out of the given options.

0

- Ans 1. GFR
 2. NJG
 3. RST
 4. DHS

Question ID : 9895804718
Chosen Option : 3

Q.2 Select the option that is related to the third term in the same way as the second term is related to the first term.

1

Lock: Key::Horse: ?

Ans

1. Carriage

2. Bull

3. Ride

4. Saucer

Question ID : 9895804721
Chosen Option : 3

Q.2 J, K, L, M, N and O are six teachers. Each one teaches a different subject out of Hindi, English, Math, Science, Social Science and Arts, not necessarily in the same order. Each of them teaches on only one day, from Monday to Saturday, not necessarily in the same order. J teaches Arts on Saturday. L teaches neither English nor Social Science, but he teaches on Thursday. Wednesday is reserved for Maths taught by K. O teaches Science a day before N. Social Science is taught a day before Arts. Which subject is taught on the first day of the week?

Ans 1. Science

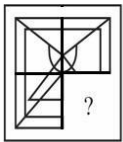
2. Hindi

3. Arts

4. English

Question ID : 9895804727
Chosen Option : --

Q.2 Select a figure from amongst the four alternatives that when placed in the blank space (?) of figure X will complete the pattern. (Rotation is not allowed).



X

Ans

1.

2.

3.

4.

Question ID : 9895804737
Chosen Option : 2

Q.2 Eight friends A, B, C, D, E, F, G and H are sitting around a circular table facing each other for a lunch. A is opposite F and third to the right B. G is between F and D. H is to the left of D. E is between C and A. Who is sitting opposite E?

Ans 1. G

2. B

3. C

4. H

Question ID : 9895804726
Chosen Option : --

The statements below are followed by two conclusions labeled I and II. Assuming that the information in the statements is true, even if it appears at variance with generally established facts, decide which conclusion(s) logically and definitely follow(s) from the information given in the statements.

Statements:

- 1) Some zoos are hangers.
- 2) Some hangers are fishes.

Conclusion

- I. Some zoos are fishes.
- II. Some hangers are zoos.

- Ans**
1. Only conclusion II follows.
 2. Both conclusions follow.
 3. Neither conclusion I nor conclusion II follows.
 4. Only conclusion I follows.

Question ID : 9895804729
Chosen Option : 4

Q.2
6 Who was the Chairman of the Drafting Committee of the Constituent Assembly?

- Ans**
1. Rajendra Prasad
 2. B.R. Ambedkar
 3. Jawaharlal Nehru
 4. K.M. Munsri

Question ID : 9895802637
Chosen Option : 1

Q.2
7 Who is the author of the book titled 'Becoming'?

- Ans**
1. Milenia Trump
 2. Shashi Tharoor
 3. Michelle Obama
 4. Therasa May

Question ID : 9895802630
Chosen Option : --

Q.2
8 Which of following sections of the Indian Constitution is also known as the 'conscience of the Indian Constitution'?

- Ans**
1. Citizenship
 2. Fundamental rights
 3. Scheduled languages
 4. Federalism

Question ID : 9895802636
Chosen Option : 2

Q.2
9 Which of the following is a non-essential life process?

- Ans**
1. Reproduction
 2. Excretion

3. Nutrition

4. Communication

Question ID : 9895802640
Chosen Option : 4

Q.3
0 Which of the following statements is incorrect about hypermetropia?

- Ans
1. Elongation of the eye ball is one of the causes of the defect.
 2. It is also known as far-sightedness.
 3. The affected person cannot see nearby objects properly.
 4. It may also arise because the focal length of the eye lens is too long.

Question ID : 9895802638
Chosen Option : --

Q.3
1 Rohan Bopanna, the Arjuna Puraskar awardee of 2018, is known for accomplishments in which sport?

- Ans
1. Tennis
 2. Wrestling
 3. Shooting
 4. Para-badminton

Question ID : 9895802628
Chosen Option : --

Q.3
2 Who designed the Swaraj Flag during the Swadesi Movement in India?

- Ans
1. Abanindranath Tagore
 2. Mahatma Gandhi
 3. Bal Gangadhar Tilak
 4. Rabindranath Tagore

Question ID : 9895802648
Chosen Option : 2

Q.3
3 Which of the following organizations publishes the World Development Report?

- Ans
1. UNESCO
 2. World Bank
 3. UNDP
 4. IMF

Question ID : 9895802632
Chosen Option : 1

Q.3
4 Which of the following departments of the Government of India runs payments banks?

- Ans
1. Department of Economic Affairs
 2. Department of Posts

3. Department of Accounting Affairs
4. Department of Financial Inclusion

Question ID : 9895802633
Chosen Option : 4

Q.3
5 Which is the highest peak of Western Ghats?

- Ans
1. Dodda Betta
 2. Mahendragiri
 3. Anamudi
 4. Baba Budan Giri

Question ID : 9895802643
Chosen Option : --

Q.3
6 In the Indian constitution, the power to legislate on the 'residual matters' has been assigned to:

- Ans
1. the Union Government
 2. the High Courts
 3. the Supreme Court
 4. the State Governments

Question ID : 9895802635
Chosen Option : 3

Q.3
7 Which of the following states has the highest population density?

- Ans
1. Bihar
 2. Tamil Nadu
 3. West Bengal
 4. Uttar Pradesh

Question ID : 9895802645
Chosen Option : 4

Q.3
8 Which of the following statements about gravitational force is NOT correct?

- Ans
1. It is inversely proportional to the square of the distance between the objects.
 2. Newton relied on the theories of Kepler in his research on the gravitational force.
 3. It is inversely proportional to the product of the masses of the objects.
 4. It is the force responsible for the attraction of every object of the universe towards each other.

Question ID : 9895802642
Chosen Option : 4

Q.3
9 Ramnath Goenka Awards are conferred for contributions in the field of:

- Ans
1. rural sanitation

2. journalism

3. women empowerment

4. sports

Question ID : 9895802629

Chosen Option : --

Q.4
0 Which of the following is NOT a folk dance form associated with Assam?

Ans 1. Bihu

2. Bagurumba

3. Mandjas

4. Satriya Nritya

Question ID : 9895802625

Chosen Option : 4

Q.4
1 Maulana Abul Kalam Azad (MAKA) Trophy is given by the Union Government to:

Ans 1. overall top performing state in national-level tournaments

2.

corporate entities who have played a visible role in the area of sports promotion and development

3.

overall top performing university in inter-university tournaments

4.

overall top performing athlete in international events organized in the year

Question ID : 9895802627

Chosen Option : --

Q.4
2 Indian businessman and philanthropist Azim Premji was recently conferred Chevalier de la Legion d'Honneur. It is the highest civilian distinction of:

Ans 1. Britain

2. France

3. Spain

4. Germany

Question ID : 9895802631

Chosen Option : 1

Q.4
3 Which of the following is NOT a world heritage site?

Ans 1. Agra Fort

2. Adamgarh Rock Shelters

3. Ajanta Caves

4. Bhimbetka Rock Shelters

Question ID : 9895802626

Chosen Option : 1

Q.4
4 The part of a leaf which connects it to the stem is called:

- Ans
- 1. lamina
 - 2. vein
 - 3. petiole
 - 4. stipules

Question ID : 9895802641
Chosen Option : 2

Q.4
5 Which of the following options is a harvest festival?

- Ans
- 1. Onam
 - 2. Janmashtami
 - 3. Dussehra
 - 4. Akshaya Tritiya

Question ID : 9895802624
Chosen Option : 1

Q.4
6 Who was the father of Sultana Raziya?

- Ans
- 1. Muhammad Tughluq
 - 2. Balban
 - 3. Iltutmish
 - 4. Kaikubad

Question ID : 9895802647
Chosen Option : 1

Q.4
7 Which of the following schemes is NOT among the Union Government's steps for financial inclusion?

- Ans
- 1. Pradhan Mantri Jeevan Jyoti Bima Yojana
 - 2. Pradhan Mantri Jan Dhan Yojana
 - 3. Pradhan Mantri Ujjawala Yojana
 - 4. Pradhan Mantri Suraksha Bima Yojana

Question ID : 9895802634
Chosen Option : 3

Q.4
8 In any food chain, the top level is occupied by:

- Ans
- 1. lions
 - 2. human beings
 - 3. serpents
 - 4. eagle

Question ID : 9895802639
Chosen Option : 1

Q.4
9 Which of the following is NOT a Neolithic cultural site?

- Ans
- 1.

- 2. Koldihwa
- 3. Mehrgarh
- 4. Burzahom

Question ID : 9895802646
Chosen Option : 3

Q.5
0 Which of the following rivers forms the famous Sivasamudram Falls?

- Ans
- 1. Kali Sind
 - 2. Kaveri
 - 3. Tungabhadra
 - 4. Krishna

Question ID : 9895802644
Chosen Option : 2

Q.5
1 What is the value of $680 - 520 \div 5 - \frac{12}{13}$ of $\left(\frac{3}{4} + \frac{1}{3}\right)$?

- Ans
- 1. 574
 - 2. 577
 - 3. 571
 - 4. 575

Question ID : 9895804361
Chosen Option : 2

Q.5
2 The length breadth and height of a cuboid are in the ratio 5 : 4 : 2. If the volume of cuboid is 5000 cm^3 , then what will be the total surface area of the cuboid?

- Ans
- 1. 1900 cm^2
 - 2. 1750 cm^2
 - 3. 2100 cm^2
 - 4. 1800 cm^2

Question ID : 9895804379
Chosen Option : --

Q.5
3 What is the value of $528 - 24 \times \frac{4}{3}$ of $\frac{25}{7} \div \frac{1}{2}$?

- Ans
- 1. 1920/7
 - 2. 2125/9
 - 3. 1926/7
 - 4. 2096/7

Question ID : 9895804360
Chosen Option : 2

Q.5
4 If the average of six consecutive even numbers is 11, then what will be the smallest number among them?

- Ans
- 1. 6
 - 2. 4

3. 8
 4. 10

Question ID : 9895804363
Chosen Option : --

Q.5 The bar chart given below shows the total exports (in ₹ 1000 crores) of a country for 7 consecutive years Y1, Y2, Y3, Y4, Y5, Y6 and Y7.



Which year shows the highest percentage change in the exports as compare to previous year?

- Ans 1. Y3
 2. Y4
 3. Y2
 4. Y5

Question ID : 9895804382
Chosen Option : 3

Q.5 If cost price of an article is ₹1126 and loss is 22%, then what will be the net loss?

- Ans 1. ₹252.60
 2. ₹247.72
 3. ₹260.52
 4. ₹232.20

Question ID : 9895804367
Chosen Option : 2

Q.5 Working 4 hours in a day, R can complete a work in 12 days and working 8 hours in a day, A can complete the same work in 9 days. Working 2 hours in a day, in how many days both R and A together can complete the same work?

- Ans 1. $72/5$ days
 2. 72 days
 3. $36/5$ days
 4. $48/5$ days

Question ID : 9895804375
Chosen Option : 2

Q.5 Cost price of first article is ₹480 and selling price of second article is ₹480. If there is a profit of 20% on first article and loss of 20% on second article, then what will be the total loss?

- Ans 1. ₹24
 2. ₹18
 3. ₹20
 4. No profit no loss

Question ID : 9895804368
Chosen Option : 2

Q.5 Curved surface area of a cylinder is 1056 cm^2 . If the height of cylinder is 8 cm, then what will be the diameter of its base?

- Ans 1.

- 2. 24.5 cm
- 3. 14.5 cm
- 4. 42 cm

Question ID : 9895804378
Chosen Option : 2

Q.6 If Highest common Factor of two numbers is 12, then which of the following cannot be their Least Common Multiple?
0

- Ans
- 1. 60
 - 2. 48
 - 3. 24
 - 4. 80

Question ID : 9895804359
Chosen Option : 2

Q.6 1400 boys and 900 girls gave an exam. If 52% boys and 68% girls pass in the exam, then what is the percentage of students who failed in the exam?
1

- Ans
- 1. 63.72%
 - 2. 41.74%
 - 3. 58.26%
 - 4. 36.28%

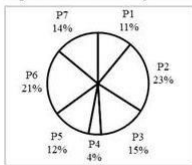
Question ID : 9895804365
Chosen Option : 2

Q.6 Manoj covers two distances of 20 km and 36 km in 5 hours and 3 hours respectively. What will be the average speed of Manoj for the whole journey?
2

- Ans
- 1. 8 km/hr
 - 2. 7 km/hr
 - 3. 5 km/hr
 - 4. 6 km/hr

Question ID : 9895804377
Chosen Option : 2

Q.6 The pie chart given below shows the imports of 7 different items P1, P2, P3, P4, P5, P6 and P7 as a percentage of total imports of a country.
3



If the total import of the country is ₹ 3000000, then how much is the import of item P6?

- Ans
- 1. 450000
 - 2. 720000
 - 3. 630000
 - 4. 690000

Question ID : 9895804383
Chosen Option : 3

Q.6 In a shop there are 60 articles. The average cost of 30 articles is ₹30 and the average cost of the remaining articles is ₹35. What is the average cost of all the articles together?

- Ans 1. ₹33
 2. ₹32.5
 3. ₹33.5
 4. ₹34

Question ID : 9895804362
Chosen Option : 2

Q.6 Mohit and Sumit start a business with investment of ₹66000 and ₹84000 respectively. If at the end of the year they earn profit in the ratio of 11 : 9, then what will be ratio of the time period for which they invest their money?

- Ans 1. 14 : 9
 2. 33 : 42
 3. 9 : 11
 4. 7 : 11

Question ID : 9895804369
Chosen Option : 2

Q.6 Marked price of a machine is 70% more than its cost price. If machine is sold at a profit of 44.5%, then what will be the discount percentage?

- Ans 1. 15%
 2. 20%
 3. 25%
 4. 17%

Question ID : 9895804364
Chosen Option : 2

Q.6 A 420 metre long train is moving at the speed of 120 km/hr. How much time it will take to cross a 580 metres long platform?

- Ans 1. 30 seconds
 2. 48 seconds
 3. 40 seconds
 4. 45 seconds

Question ID : 9895804376
Chosen Option : 2

Q.6 A number is increased by 40% and the resultant is decreased by 25%. What will be the total percentage increase?

- Ans 1. 10%
 2. 6%
 3. 5%
 4. 4%

Question ID : 9895804366
Chosen Option : 2

Q.6 If $p : q = 7 : 8$, then what will be $(p^2/q) : (q^2/p)$?

- Ans 1. 512 : 343
 2. 49 : 64
 3. 343 : 512

4. 7 : 8

Question ID : 9895804371
Chosen Option : 2

Q.7 Simple interest on a sum for 4 years is ₹ 24000 and the compound interest on the same sum at same rate of interest (interest is compounded annually) for 2 years is ₹ 12750. What is the rate of interest per annum?

- Ans 1. 12.5%
 2. 20%
 3. 15%
 4. 18%

Question ID : 9895804373
Chosen Option : 2

Q.7 A bag has white and yellow balls in the ratio 12 : 17 respectively. If the total number of balls is 116, then how many balls are yellow?

- Ans 1. 62
 2. 74
 3. 68
 4. 76

Question ID : 9895804370
Chosen Option : 2

Q.7 18 workers can complete one-third of a work in 27 days. How many workers can complete the same whole work in 9 days?

- Ans 1. 128 days
 2. 162 days
 3. 112 days
 4. 148 days

Question ID : 9895804374
Chosen Option : --

Q.7 The ratio of the areas of two triangles is 6 : 1 and the ratio of their bases is 3 : 2. What will be the ratio of their height?

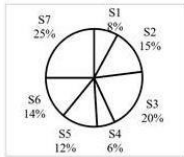
- Ans 1. 5 : 1
 2. 4 : 1
 3. 2 : 1
 4. 2 : 3

Question ID : 9895804380
Chosen Option : --

Q.7 A sum of ₹10000 becomes ₹16000 at the rate of 15% per annum on simple interest in P years. What will be the value of P ?

- Ans 1. 3 years
 2. 4 years
 3. 6 years
 4. 5 years

Q.7 The pie chart given below shows the annual snowfall received by 7 states of a country. The snowfall is shown as a percentage of total annual snowfall of the country.



If the annual snowfall received by the country is 700 cm. What is the average annual snowfall of S2, S6 and S7?

- Ans
- 1. Cannot be determined
 - 2. 154 cm
 - 3. 126 cm
 - 4. 84 cm

Section : English Language

Q.1 Identify the segment in the sentence which contains the grammatical error from the given options.

Today we are closer to reaching an agreement that we were a few months ago.

- Ans
- 1. a few months ago
 - 2. to reaching
 - 3. we are closer
 - 4. that we were

Q.2 Identify the segment in the sentence which contains the grammatical error from the given options.

We must realize that learning from mistakes are an important part of life.

- Ans
- 1. mistakes are
 - 2. part of life
 - 3. that learning from
 - 4. We must realize

Q.3 Select the word which means the same as the group of words given.

That which cannot be conquered

- Ans
- 1. Incapable
 - 2. Invincible
 - 3. Inevitable
 - 4. Invisible

Q.4 Select the most appropriate synonym of the given word.

GLOOMY

- Ans
1. Light
 2. Dull
 3. Bright
 4. Painful

Question ID : 9895804818
Chosen Option : 3

Q.5 Select the word which means the same as the group of words given.

A person who eats too much

- Ans
1. Greedy
 2. Glutton
 3. Obese
 4. Liberal

Question ID : 9895804826
Chosen Option : 2

Q.6 Select the correctly spe

- Ans
1. immigiate
 2. immidiate
 3. imediate
 4. immediate

Question ID : 9895804825
Chosen Option : 4

Q.7 Select the most appropriate meaning of the given idiom.

Once in a blue moon


- Ans
1. Rarely
 2. Usually
 3. Never
 4. Frequently

Question ID : 9895804823
Chosen Option : 1

Q.8 Select the most appropriate option to substitute the underlined segment in the given sentence. If there is no need to substitute it, select No improvement.

By seeing the cameras the villagers were convinced that the tourists intended to take photographs.





- Ans
1. Seeing the cameras
 2. Seen the cameras
 3. No improvement

 4. Saw a camera

Question ID : 9895804837
Chosen Option : 3

Q.9 Select the most appropriate word to fill in the blank.

He was vexed _____ the behaviour of his daughter.

- Ans  1. from
 2. for
 3. on
 4. with

Question ID : 9895804834
Chosen Option : 4

Comprehension:

In the following passage some words have been deleted. Fill in the blanks with the help of the alternatives given. Select the most appropriate option for each number.

There is an important aspect which (1) _____ a mention in any discussion of the future of Indian theatre. It is the (2) _____ development of the cinema as a competitor for (3) _____ among people. In (4) _____ early flush of cinematic triumph, the experts in the field (5) _____ the extinction of the theatre.

SubQuestion No : 10

Q.1₀ Fill in blank (1) with the most appropriate option.

- Ans  1. involves
 2. deserves
 3. invites
 4. dictates

Question ID : 9895804839
Chosen Option : 1





Comprehension:

In the following passage some words have been deleted. Fill in the blanks with the help of the alternatives given. Select the most appropriate option for each number.

There is an important aspect which (1) _____ a mention in any discussion of the future of Indian theatre. It is the (2) _____ development of the cinema as a competitor for (3) _____ among people. In (4) _____ early flush of cinematic triumph, the experts in the field (5) _____ the extinction of the theatre.

SubQuestion No : 11

Q.1₁ Fill in blank (2) with the most appropriate option.

- Ans  1. rapid
 2. prompt
 3. express
 4. hurried

Question ID : 9895804840
Chosen Option : 1

Comprehension:

In the following passage some words have been deleted. Fill in the blanks with the help of the alternatives given. Select the most appropriate option for each number.

There is an important aspect which (1) _____ a mention in any discussion of the future of Indian theatre. It is the (2) _____ development of the cinema as a competitor for (3) _____ among people. In (4) _____ early flush of cinematic triumph, the experts in the field (5) _____ the extinction of the theatre.

SubQuestion No : 12

Q.1
2 Fill in blank (3) with the most appropriate option.

- Ans
1. popularity
 - ~~2. demand~~
 - ~~3. fame~~
 - ~~4. choice~~

Question ID : 9895804841
Chosen Option : 1

Comprehension:

In the following passage some words have been deleted. Fill in the blanks with the help of the alternatives given. Select the most appropriate option for each number.

There is an important aspect which (1) _____ a mention in any discussion of the future of Indian theatre. It is the (2) _____ development of the cinema as a competitor for (3) _____ among people. In (4) _____ early flush of cinematic triumph, the experts in the field (5) _____ the extinction of the theatre.

SubQuestion No : 13

Q.1
3 Fill in blank (4) with the most appropriate option.

- Ans
- ~~1. a~~
 2. the
 - ~~3. some~~
 - ~~4. one~~

Question ID : 9895804842
Chosen Option : 1

Comprehension:

In the following passage some words have been deleted. Fill in the blanks with the help of the alternatives given. Select the most appropriate option for each number.

There is an important aspect which (1) _____ a mention in any discussion of the future of Indian theatre. It is the (2) _____ development of the cinema as a competitor for (3) _____ among people. In (4) _____ early flush of cinematic triumph, the experts in the field (5) _____ the extinction of the theatre.

SubQuestion No : 14

Q.1
4 Fill in blank (5) with the most appropriate option.

- Ans
1. predicted
 - ~~2. regarded~~
 - ~~3. calculated~~
 - ~~4. studied~~

Question ID : 9895804843
Chosen Option : 4

Q.1
5 Select the most appropriate meaning of the given idiom.

At daggers drawn

- Ans
1. Being irritated
 2. Being friendly
 3. Being familiar
 4. Being hostile

Question ID : 9895804822

Q.1
6 Select the most appropriate synonym of the given word.

MENACE

- Ans
1. Help
 2. Delight
 3. Harassment
 4. Nuisance

Question ID : 9895804819
Chosen Option : 1

Q.1
7 Select the most appropriate ANTONYM of the given word.

SOGGY

- Ans
1. Cool
 2. Moist
 3. Damp
 4. Dry

Question ID : 9895804820
Chosen Option : 1

Q.1
8 Select the most appropriate option to substitute the underlined segment in the given sentence. If there is no need to substitute it, select No improvement.

One can succeed in business unless one is prepared to take risks.

- Ans
1. One cannot succeed
 2. No one cannot succeed
 3. No improvement
 4. One cannot hardly succeed

Question ID : 9895804835
Chosen Option : 2

Q.1
9 Select the most appropriate word to fill in the blank.

Owing to the heavy rains the office building was badly _____.

- Ans
1. damage
 2. damages
 3. damaged
 4. damaging

Question ID : 9895804833
Chosen Option : 4

Q.2
0 Identify the segment in the sentence which contains the grammatical error from the given options.

We have to check the records to find out how much cheques have been collected so far.

- Ans 1.

- 2. much cheques
- 3. have to check
- 4. to find out

Question ID : 9895804830
Chosen Option : 1

Q.2
1 Select the most appropriate word to fill in the blank.

While walking on the beach we _____ seashells.

- Ans
- 1. assembled
 - 2. increased
 - 3. needed
 - 4. collected

Question ID : 9895804829
Chosen Option : 4

Q.2
2 Select the correctly spelt word.

- Ans
- 1. Bagger
 - 2. Beggar
 - 3. Begger
 - 4. Baggar

Question ID : 9895804824
Chosen Option : 3

Q.2
3 Select the most appropriate option to substitute the underlined segment in the given sentence. If there is no need to substitute it, select No improvement.

I am not frightened of Shere Khan so I know that he is very cunning.

- Ans
- 1. in case I know
 - 2. No improvement
 - 3. so I know
 - 4. but I know

Question ID : 9895804836
Chosen Option : 4

Q.2
4 Select the most appropriate word to fill in the blank.

He _____ himself from taking sugary foods.

- Ans
- 1. recovered
 - 2. restricted
 - 3. resorted
 - 4. removed

Question ID : 9895804828
Chosen Option : 2

Q.2

5 Select the most appropriate ANTONYM of the given word.

MISERABLE

- Ans
- 1. Lonely
 - 2. Cheerful
 - 3. Hopeless
 - 4. Miserly

Question ID : 9895804821
Chosen Option : 3

Section : Hindi Language

Q.1 रिक्त स्थान को भरने के लिए उपयुक्त शब्द का चयन करें।

साहिल को पाँच _____ दूध चाहिए।

- Ans
- 1. मीटर
 - 2. किलो
 - 3. लीटर
 - 4. दर्जन

Question ID : 9895803780
Chosen Option : --

Q.2 दिये गये वाक्यांश के लिए एक शब्द दीजिये।

साथ चलने वाला

- Ans
- 1. सहयोग
 - 2. प्रतिगामी
 - 3. सहगामी
 - 4. सहयोगी

Question ID : 9895803796
Chosen Option : --

Q.3 दिए गए शब्द का विलोम चुनें।

कनिष्ठ

- Ans
- 1. वरिष्ठ
 - 2. सहकर्मी
 - 3. सहायक
 - 4. अनुदार

Question ID : 9895803790
Chosen Option : --

Q.4

दिए गए शब्द के पर्यायवाची शब्द का चयन करें।

अभ्युदय

Ans

1. उन्नति
2. इच्छा
3. अवनति
4. आकांक्षा

Question ID : 9895803792
Chosen Option : --

Q.5 निम्नलिखित में से उस विकल्प का चयन करें जो 'चेहरे पर हवाइयाँ उड़ना' मुहावरे का अर्थ व्यक्त करता है।

Ans

1. प्रसन्न होना
2. निश्चित होना
3. चेहरे पर हवा लगना
4. घबरा जाना

Question ID : 9895803795
Chosen Option : --

Q.6 दिये गये वाक्यांश के लिए एक शब्द दीजिये।

परोपकार करने वाला

Ans

1. कृतज्ञ
2. सहकारी
3. कृतघ्न
4. परोपकारी

Question ID : 9895803797
Chosen Option : --

Q.7 दिए गए वाक्य में रेखांकित खंड को प्रतिस्थापित करने के लिए उपयुक्त विकल्प का चयन करें।

मजदूर ने चटनी की रोटी खाई और काम पर चला गया।

Ans

1. मजदूर ने रोटी के चटनी खाई
2. मजदूर ने रोटी का चटनी खाई
3. मजदूर ने रोटी को चटनी खाई
4. मजदूर ने चटनी से रोटी खाई

Question ID : 9895803779
Chosen Option : --

Q.8 दिए गए वाक्य का वह भाग ज्ञात करें जिसमें कोई त्रुटि है।

संतों को जीवन परोपकार के लिए होता है।

- Ans 1. संतों को
 2. होता है।
 3. परोपकार के लिए
 4. जीवन

Question ID : 9895803775
Chosen Option : --

Q.9 दिए गए वाक्य में रेखांकित खंड को प्रतिस्थापित करने के लिए उपयुक्त विकल्प का चयन करें।

अपने कार्य को अपने आप करना ही स्वावलंबन कहलाती है।

- Ans 1. स्वावलंबन कहलाता है।
 2. स्वावलंबन कहलाते हैं।
 3. स्वावलंबी कहलाता हैं।
 4. स्वावलंबन कहलाते है।

Question ID : 9895803777
Chosen Option : --

Q.1 ₀ सही वर्तनी वाले शब्द का चयन करें।

- Ans 1. निराकार
 2. निर्कार
 3. निरकार
 4. नीराकार

Question ID : 9895803799
Chosen Option : --

Q.1 ₁ दिए गए शब्द के पर्यायवाची शब्द का चयन करें।

प्रकृति

- Ans 1. कुदरत
 2. हरियाली
 3. सृष्टि
 4. संसार

Question ID : 9895803793
Chosen Option : --

Q.1 ₂ निम्नलिखित में से उस विकल्प का चयन करें जो 'एक ही थैली के चड़े-बड़े' मुहावरे का अर्थ व्यक्त करता है।

- Ans 1. एक जैसे लोग
 2. एक शक्ति के लोग
 3. एक थैले में चड़े और बड़े रखना

✗ 4. एक ही नाम वाले लोग

Question ID : 9895803794
Chosen Option : --

Q.1
3 दिए गए वाक्य का वह भाग ज्ञात करें जिसमें कोई त्रुटि है।

आज दुर्भाग्य से शिक्षण संस्थाओं पर अनुशासनहीनता का आधिक्य है।

Ans

- ✓ 1. आज दुर्भाग्य से
2. शिक्षण संस्थाओं पर
3. अनुशासनहीनता का
4. आधिक्य है।

Question ID : 9895803776
Chosen Option : --

Q.1
4 रिक्त स्थान को भरने के लिए उपयुक्त शब्द का चयन करें।

राम ने रावण से _____ किया।

Ans

1. समझौता
2. युद्ध
3. ईर्ष्या
4. भेदभाव

Question ID : 9895803783
Chosen Option : --

Comprehension:

निम्नलिखित गद्यांश के रिक्त स्थानों की पूर्ति गद्यांश के नीचे दिए गए प्रश्नों के अनुसार कीजिए -

_____ (1) अनमोल धन है। इसकी _____ (2) किसी से भी नहीं की जा सकती। हीरे _____ (3) या सोने-चाँदी से भी नहीं। सच्ची मित्रता में किसी कारण से _____ (4) नहीं आ सकता। बाइबिल में कहा गया है कि एक सच्चा मित्र विश्व की _____ (5) दवा है।

SubQuestion No : 15

Q.1
5 गद्यांश में संकेतित रिक्त स्थान (1) के लिए उपयुक्त शब्द होगा-

Ans

1. मित्रता
2. भाईचारा
✓ 3. बहनापा
4. शिशुता

Question ID : 9895803785
Chosen Option : --

Comprehension:

निम्नलिखित गद्यांश के रिक्त स्थानों की पूर्ति गद्यांश के नीचे दिए गए प्रश्नों के अनुसार कीजिए -

_____ (1) अनमोल धन है। इसकी _____ (2) किसी से भी नहीं की जा सकती। हीरे _____ (3) या सोने-चाँदी से भी नहीं। सच्ची मित्रता में किसी कारण से _____ (4) नहीं आ सकता। बाइबिल में कहा गया है कि एक सच्चा मित्र विश्व की _____ (5) दवा है।

SubQuestion No : 16

Q.1
6 गद्यांश में संकेतित रिक्त स्थान (2) के लिए उपयुक्त शब्द होगा-

- Ans
1. उपेक्षा
 2. तुलना
 3. अपेक्षा
 4. बड़ाई

Question ID : 9895803786

Chosen Option : --

Comprehension:

निम्नलिखित गद्यांश के रिक्त स्थानों की पूर्ति गद्यांश के नीचे दिए गए प्रश्नों के अनुसार कीजिए -

_____ (1) अनमोल धन है। इसकी _____ (2) किसी से भी नहीं की जा सकती। हीरे _____ (3) या सोने-चाँदी से भी नहीं। सच्ची मित्रता में किसी कारण से _____ (4) नहीं आ सकता। बाइबिल में कहा गया है कि एक सच्चा मित्र विश्व की _____ (5) दवा है।

SubQuestion No : 17

Q.1
7 गद्यांश में संकेतित रिक्त स्थान (3) के लिए उपयुक्त शब्द होगा

- Ans
1. मोती
 2. रूपा
 3. लाल
 4. रत्न

Question ID : 9895803787

Chosen Option : --

Comprehension:

निम्नलिखित गद्यांश के रिक्त स्थानों की पूर्ति गद्यांश के नीचे दिए गए प्रश्नों के अनुसार कीजिए -

_____ (1) अनमोल धन है। इसकी _____ (2) किसी से भी नहीं की जा सकती। हीरे _____ (3) या सोने-चाँदी से भी नहीं। सच्ची मित्रता में किसी कारण से _____ (4) नहीं आ सकता। बाइबिल में कहा गया है कि एक सच्चा मित्र विश्व की _____ (5) दवा है।

SubQuestion No : 18

Q.1
8 गद्यांश में संकेतित रिक्त स्थान (4) के लिए उपयुक्त शब्द होगा

- Ans
1. अपरिहार्य
 2. दखल
 3. हस्तक्षेप
 4. व्यवधान

Question ID : 9895803788
Chosen Option : --

Comprehension:

निम्नलिखित गद्यांश के रिक्त स्थानों की पूर्ति गद्यांश के नीचे दिए गए प्रश्नों के अनुसार कीजिए -

_____ (1) अनमोल धन है। इसकी _____ (2) किसी से भी नहीं की जा सकती। हीरे _____ (3) या सोने-चाँदी से भी नहीं। सच्ची मित्रता में किसी कारण से _____ (4) नहीं आ सकता। बाइबिल में कहा गया है कि एक सच्चा मित्र विश्व की _____ (5) दवा है।

SubQuestion No : 19

Q.1
9 गद्यांश में संकेतित रिक्त स्थान (5) के लिए उपयुक्त शब्द होगा

- Ans
1. सर्वश्रेष्ठ
 2. हीन
 3. साधारण
 4. अधम

Question ID : 9895803789
Chosen Option : --

Q.2
0 दिए गए वाक्य का वह भाग ज्ञात करें जिसमें कोई त्रुटि है।

मानव जाति अपने को पशुओं का श्रेष्ठ और सभ्य होने का दावा करती है।

- Ans
1. मानव जाति
 2. अपने को पशुओं का
 3. श्रेष्ठ और सभ्य होने का
 4. दावा करती है।

Question ID : 9895803774
Chosen Option : --

Q.2
1 सही वर्तनी वाले शब्द का चयन करें।

- Ans
1. निरामिष
 2. निरामिश

3. निरामईष

4. नीरामिष

Question ID : 9895803798

Chosen Option : --

Q.2
2 रिक्त स्थान को भरने के लिए उपयुक्त शब्द का चयन करें।

योद्धा ने बहादुरी के साथ _____ की।

Ans

1. लिखाई

2. रुलाई

3. लड़ाई

4. पढ़ाई

Question ID : 9895803781

Chosen Option : --

Q.2
3 दिए गए वाक्य में रेखांकित खंड को प्रतिस्थापित करने के लिए उपयुक्त विकल्प का चयन करें।

जीवन अवसरों में एक धारा है।

Ans

1. अवसरों की एक धारा

2. अवसरों के एक धारा

3. अवसरों का एक धारा

4. अवसरों पर धारा

Question ID : 9895803778

Chosen Option : --

Q.2
4 दिए गए शब्द का विलोम चुनें।

विस्तृत

Ans

1. संक्षिप्त

2. अधम

3. अवर

4. दीर्घ

Question ID : 9895803791

Chosen Option : --

Q.2
5 रिक्त स्थान को भरने के लिए उपयुक्त शब्द का चयन करें।

नेता ने बहुत ही बढ़िया _____ दिया।

Ans

1. आख्यान

2. भाषण

3. वाद-विवाद

✘ प्रवचन

Constable (GD) in CAPFs, NIA, SSF and Rifleman (GD) in Assam Rifles Examination, 2018

Roll No. :	
Registration No.	
Name :	
Exam Venue :	
Exam Time :	4:00 PM - 5:30 PM
Exam Date :	13/02/2019

Section : General Section

Q.1 The statements below are followed by two conclusions labeled I and II. Assuming that the information in the statements is true, even if it appears at variance with generally established facts, decide which conclusion(s) logically and definitely follow(s) from the information given in the statements.

Statements:

- 1) All birds are cups.
- 2) Some cups are cats.

Conclusion:

- I. All birds are cats.
- II. Some cups are birds.

- Ans
1. Only conclusion I follows.
 2. Either conclusion I or conclusion II follows.
 3. Both conclusions follow.
 4. Only conclusion II follows.

Question ID : 9895802812
Chosen Option : 4

Q.2 There is only one dictionary in a Library which will be used by 6 students P, Q, R, S, T and U, one by one. S will use it immediately after Q and before P. T will use it immediately after R and before U. R will use the dictionary after P. Who will use the dictionary the last?

- Ans
1. Q
 2. P
 3. T
 4. U

Question ID : 9895802811
Chosen Option : 4

Q.3 In a certain code, CONCOLOGY is written as YGOLOCNOC. How will PALAEOGRAPHY be written in that code?

- Ans
1. YHPRAGOEALAP
 2. YHPARGOEALAP
 3. YHPARGOAEALAP
 4. YHPARGEOALAP

Question ID : 9895802807
Chosen Option : --

Q.4

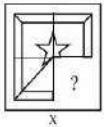
Select the option that will correctly replace the question mark (?) in the series.

7, 18, 40, 73, ?

- Ans 1. 117
 2. 115
 3. 127
 4. 107

Question ID : 9895802814
Chosen Option : 1

Q.5 Select a figure from amongst the four alternatives that when placed in the blank space (?) of figure X will complete the pattern. (Rotation is not allowed).



- Ans 1.
- 2.
- 3.
- 4.

Question ID : 9895802821
Chosen Option : 2

Q.6 Select the option that will correctly replace the question mark (?) in the series.

15, 19, 35, 71, ?

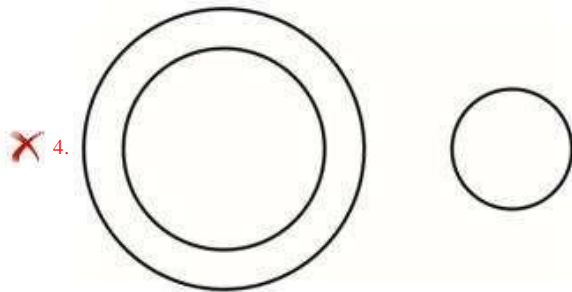
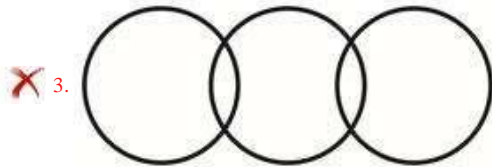
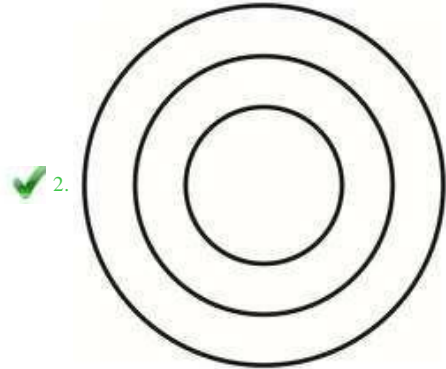

- Ans 1. 125
 2. 141
 3. 145
 4. 135

Question ID : 9895802815
Chosen Option : 4

Q.7 Select the Venn diagram that best represents the given set of classes.

India, Visakhapatnam, Andhra Pradesh

Ans



Question ID : 9895802825
Chosen Option : 2

Q.8 Select the option that is related to the third term in the same way as the second term is related to the first term.

Quarrel : War :: Wish : ?

- Ans 1. Ask
 2. Desire
 3. Drown
 4. Sad

Question ID : 9895802805
Chosen Option : 2

Q.9 Eight friends A, B, C, D, E, F, G and H are sitting around a circular table facing each other for a lunch. A is opposite F and third to the right of B. G is between F and D. H is to the left of D. E is between C and A. Who is sitting third to the right of A?

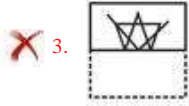
- Ans 1. D
 2. G
 3. B
 4. C

Question ID : 9895802810

Q.1
0 A square transparent sheet with a pattern is given. How will the pattern appear when the transparent sheet is folded along the dotted line?



Ans



Question ID : 9895802824
Chosen Option : 2

Q.1
1 Find out the two signs to be interchanged to make the following equation correct.

$$24 + 2 \times 2 - 6 + 3 = 22$$

- Ans
1. \times and $+$
2. $-$ and $+$
3. $+$ and $-$
4. $+$ and \times

Question ID : 9895802819
Chosen Option : --

Q.1
2 Choose the odd one out of the given options.

- Ans
1. Kabul
2. Bahrain
3. Vienna
4. Canberra

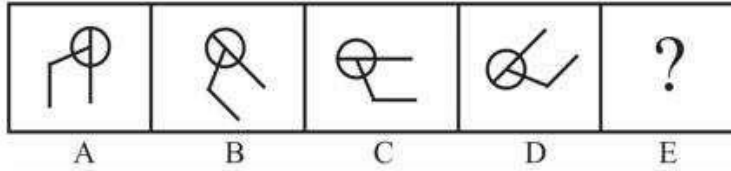
Question ID : 9895802803
Chosen Option : 4

Q.1
3 In a certain code, OOOLOGY is written as 89. How will VIROLOGY be written in that code?

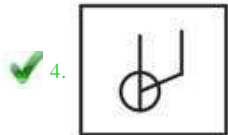
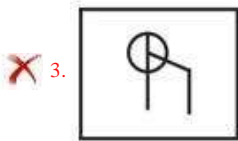
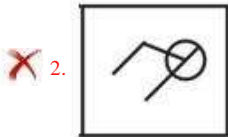
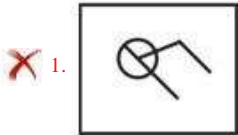
- Ans
1. 89
2. 123
3. 97
4. 113

Question ID : 9895802808
Chosen Option : 2

Q.1 4 Choose the option that would follow next in the given figure series.



Ans



Question ID : 9895802820
Chosen Option : 4

Q.1 5 The statements below are followed by two conclusions labeled I and II. Assuming that the information in the statements is true, even if it appears at variance with generally established facts, decide which conclusion(s) logically and definitely follow(s) from the information given in the statements.

Statements:

- 1) All goats are dogs.
- 2) Some goats are cows.

Conclusion:

- I. Some dogs are cows.
- III. Some cows are dogs.

- Ans
1. Only conclusion I follows.
 2. Only conclusion II follows.
 3. Neither conclusion I nor conclusion II follows.
 4. Both conclusions follow.

Question ID : 9895802813
Chosen Option : --

Q.1 6 Select the option that is related to the third number in the same way as the second number is related to the first number.

19: 441 :: 17: ?

- Ans
1. 225
 2. 144
 3. 169
 4. 361

Q.1
7 Choose the odd number out of the given options.

- Ans
- 1. 519
 - 2. 566
 - 3. 357
 - 4. 276

Q.1
8 Seven friends O, P, Q, R, S, T and U are watching a movie sitting in a row. S is sitting at one extreme end. Q is sitting second to the right of S. P is sitting between O and Q. U is not sitting at any extreme end. R is sitting to the left of T. Who is sitting to the immediate right of P?

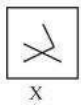
- Ans
- 1. Q
 - 2. R
 - 3. U
 - 4. O

Q.1
9 Select the option that is related to the third term in the same way as the second term is related to the first term.

DFH: IKM : EGI : ?

- Ans
- 1. JLM
 - 2. JLN
 - 3. JIM
 - 4. JLI

Q.2
0 Choose the option in which the figure marked 'X' is embedded. (Rotation is not allowed)



- Ans
- 1.
 - 2.
 - 3.
 - 4.

Q.2
1 Select the option that will correctly replace the question mark (?) in the given pattern.

4	7	6
5	?	8
41	85	100

- Ans
- 1. 13
 - 2. 6
 - 3. 9
 - 4. 11

Question ID : 9895802818
Chosen Option : 2

Q.2
2 Select the option that will correctly replace the question mark (?) in the series.

QLA, ONY, MPW, KRU, ?

- Ans
- 1. ITS
 - 2. ITU
 - 3. JTS
 - 4. IST

Question ID : 9895802801
Chosen Option : 3

Q.2
3 Choose the option that most closely resembles the mirror image of the given word when mirror is placed at right side.

QUENCH

- Ans
- 1.
 - 2.
 - 3.
 - 4.

Question ID : 9895802823
Chosen Option : 2

Q.2
4 Select the option that is related to the third term in the same way as the second term is related to the first term.

Assume : Presume :: Calm : ?

- Ans
- 1. Peace
 - 2. Proclaim
 - 3. Ego

4. Sedate

Question ID : 9895802804
Chosen Option : 4

Q.2
5 Choose the odd one out of the given options.

- Ans 1. SGH
 2. SHT
 3. HKO
 4. IET

Question ID : 9895802802
Chosen Option : 2

Q.2
6 Magnus Carlsen is famous for which of the following sports?

- Ans 1. Tennis
 2. Football
 3. Carrom
 4. Chess

Question ID : 9895802862
Chosen Option : 4

Q.2
7 Which of the following terms is NOT used in the banking field?

- Ans 1. Repo rate
 2. Zero hour
 3. Collateral
 4. Interest rate swap

Question ID : 9895802856
Chosen Option : 2

Q.2
8 From which country did the Indian Constitution borrow the idea of directive principles of state policy?

- Ans 1. Britain
 2. Germany
 3. South Africa
 4. Ireland

Question ID : 9895802851
Chosen Option : 4

Q.2
9 निम्नलिखित में से कौन सा मंत्रालय हर साल संसद में आर्थिक सर्वेक्षण प्रस्तुत करता है?

- Ans 1. वित्त
 2. कॉर्पोरेट कार्य
3. गृह कार्य
4. वाणिज्य

Question ID : 9895802854
Chosen Option : 1

Q.3
0 As per the text 'Charaka Samhita' how many bones are there in a human body?

- Ans
- 1. 206
 - 2. 360
 - 3. 370
 - 4. 208

Question ID : 9895802873
Chosen Option : 1

Q.3
1 The peninsular plateau of India is part of which of the following landmass?

- Ans
- 1. Gondwana land
 - 2. Tethys
 - 3. Andean
 - 4. Laurasia

Question ID : 9895802871
Chosen Option : 1

Q.3
2 The popular depiction named 'Ravana Shaking Mount Kailash' is depicted in which of the following caves?

- Ans
- 1. Kanheri
 - 2. Ellora
 - 3. Hatigumpha
 - 4. Ajanta

Question ID : 9895802868
Chosen Option : --

Q.3
3 Which of the following articles of the Indian Constitution provides powers to the president of India to declare National emergency?

- Ans
- 1. Article 356
 - 2. Article 371
 - 3. Article 352
 - 4. Article 372

Question ID : 9895802852
Chosen Option : 3

Q.3
4 The Brihadeswara temple at Tanjore belongs to which of the religious sects?

- Ans
- 1. Alvars
 - 2. Shakta
 - 3. Nayanars
 - 4. Vedic

Question ID : 9895802867
Chosen Option : --

Q.3
5 Which one of the following waves are used by the common TV remote control?

- Ans
- 1. Lasers
 - 2. Radio waves
 - 3. Ultrasonic waves
 - 4. Infrared waves

Question ID : 9895802860
Chosen Option : 4

Q.3
6 The National Sports Day is celebrated on which day in India?

- Ans
- 1. August 29
 - 2. August 26
 - 3. August 28
 - 4. August 27

Question ID : 9895802863
Chosen Option : 1

Q.3
7 The Sangai festival is celebrated in which of the following states of India?

- Ans
- 1. Arunachal Pradesh
 - 2. Meghalaya
 - 3. Nagaland
 - 4. Manipur

Question ID : 9895802869
Chosen Option : --

Q.3
8 According to Union Budget 2018, how much amount was allocated for Operation Green?

- Ans
- 1. 600 crore
 - 2. 500 crore
 - 3. 400 crore
 - 4. 700 crore

Question ID : 9895802855
Chosen Option : --

Q.3
9 Which juice secreted by the organs in the alimentary canal plays an important role in the digestion of fats?

- Ans
- 1. Pancreatic juice, saliva
 - 2. Hydrochloric acid, mucus
 - 3. Bile juice, Pancreatic juice
 - 4. Saliva, hydrochloric acid

Question ID : 9895802861
Chosen Option : 2

Q.4
0 "The Long walk to Freedom" is the autobiography of:

Ans

- 1. Nelson Mandela
- 2. Martin Luther King
- 3. John F Kennedy
- 4. Abraham Lincoln

Question ID : 9895802864
Chosen Option : 1

Q.4
1 Who is the Ex-Officio Chairman of Rajya Sabha?

- Ans
- 1. Opposition Leader in Rajya Sabha
 - 2. Speaker
 - 3. Vice President of India
 - 4. Prime Minister

Question ID : 9895802853
Chosen Option : 3

Q.4
2 Which of the below rivers is also referred to as "Dakshin Ganga"?

- Ans
- 1. Periyar
 - 2. Krishna
 - 3. Kaveri
 - 4. Godavari

Question ID : 9895802870
Chosen Option : 4

Q.4
3 'स्वराज यह मेरा जन्मसिद्ध अधिकार है और मैं इसे लेकर ही रहूँगा' यह नारा निम्नलिखित में से किसने दिया था?

- Ans
- 1. बाल गंगाधर तिलक
 - 2. गोपाल कृष्ण गोखले
 - 3. चित्तरंजन दास
 - 4. दादा भाई नौरोजी

Question ID : 9895802875
Chosen Option : 1

Q.4
4 The ancient name of Coastal Orissa was:

- Ans
- 1. Kalinga
 - 2. Kaushambi
 - 3. Kamarupa
 - 4. Khandesh

Question ID : 9895802874
Chosen Option : 1

Q.4
5 The novel "The God of Small Things" is inspired by which country?

- Ans
- 1.

- 2. India
- 3. Bangladesh
- 4. Nepal

Question ID : 9895802865
Chosen Option : 1

Q.4
6 Which of the following is NOT a major source of proteins?

- Ans
- 1. Soyabean
 - 2. Wheat
 - 3. Fish
 - 4. Gram

Question ID : 9895802858
Chosen Option : 2

Q.4
7 A solution of which of the following is needed to test the presence of proteins?

- Ans
- 1. Copper sulphate and caustic soda solution
 - 2. Iodine and caustic soda solution
 - 3. Copper sulphate and iodine solution
 - 4. Iodine solution

Question ID : 9895802857
Chosen Option : --

Q.4
8 Which of the following statements describes “endemic species”?

- Ans
- 1. Species with less population may move to the category of endangered species.
 - 2. Species that are not found existing after intense searches.
 - 3. Species that are found only in some particular areas.
 - 4. Species that have come from abroad.

Question ID : 9895802872
Chosen Option : 1

Q.4
9 Which of the following days is observed as the “Human Rights Day”?

- Ans
- 1. February 10
 - 2. November 10
 - 3. December 10
 - 4. January 10

Question ID : 9895802866
Chosen Option : 2

Q.5
0 Which of the following aquatic animals does NOT have gills?

- Ans
- 1.

- 2. Squid
- 3. Clownfish
- 4. Whale

Question ID : 9895802859
Chosen Option : 3

Q.5 If C alone can complete two-third part of a work in 12 days, then in how many days C can complete the whole work?

1

- Ans
- 1. 24 days
 - 2. 15 days
 - 3. 8 days
 - 4. 18 days

Question ID : 9895804608
Chosen Option : 4

Q.5 What is the value of $512 \div 16 + 4 \times \frac{5}{2}$ of $\left(\frac{1}{8} + \frac{1}{3}\right)$?

Ans

- 1. $\frac{455}{12}$
- 2. $\frac{449}{12}$
- 3. $\frac{439}{12}$
- 4. $\frac{443}{12}$

Question ID : 9895804593
Chosen Option : 3

Q.5 The perimeter of a rectangular table is 60 cm. If the area of the rectangular table is 209 cm^2 , then what will be the length of the table?

3

- Ans
- 1. 17 cm
 - 2. 19 cm
 - 3. 13 cm
 - 4. 21 cm

Question ID : 9895804612
Chosen Option : 2

Q.5 Marked price of an article is 70% more than its cost price. After giving a discount of 10%, article is sold for ₹ 1071. What will be the cost price of the article?

4

- Ans
- 1. ₹ 530
 - 2. ₹ 590
 - 3. ₹ 700
 - 4. ₹ 620

Question ID : 9895804597
Chosen Option : 3

Q.5 The compound interest on a sum for 5th year is ₹ 7800 and compound interest for sixth year is ₹ 9048 (interest is compounded annually). What is the rate of interest?

5

- Ans 1. 12%
 2. 15%
 3. 16%
 4. 14%

Question ID : 9895804606
Chosen Option : 3

Q.5
6 If cost price of an article is ₹ 928 and profit is 15%, then what will be the net profit?

- Ans 1. ₹ 154.50
 2. ₹ 139.20
 3. ₹ 212
 4. ₹ 168.40

Question ID : 9895804601
Chosen Option : 2

Q.5
7 Simple interest for three years for a certain sum at the rate of 15% is ₹ 9000. If the rate of interest becomes 30%, then what will be the simple interest for two years?

- Ans 1. ₹ 27000
 2. ₹ 4500
 3. ₹ 12000
 4. ₹ 9000

Question ID : 9895804605
Chosen Option : 3

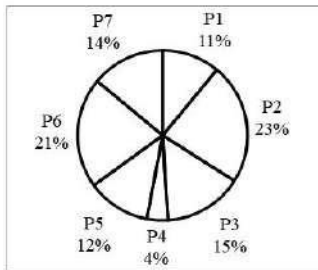
Q.5
8 What is the value of $1040 \div 65 - 8 \times \frac{1}{2}$ of $\left(\frac{1}{2} - \frac{1}{3}\right)$?

- Ans 1. $\frac{44}{3}$
 2. $\frac{49}{3}$
 3. $\frac{50}{3}$
 4. $\frac{46}{3}$

Question ID : 9895804594
Chosen Option : --

Q.5
9

The pie chart given below shows the imports of 7 different items P1, P2, P3, P4, P5, P6 and P7 as a percentage of total imports of a country.



If the total import of item P1 is ₹ 33000, then what is the value of imports of item P2?

- Ans
- 1. 46000
 - 2. 57500
 - 3. 80500
 - 4. 69000

Question ID : 9895804615
Chosen Option : 4

Q.6 If $1/A : 1/B : 1/C = 2 : 3 : 4$, then what is the ratio of $A : B : C$?

- Ans
- 1. 6 : 4 : 3
 - 2. 4 : 3 : 6
 - 3. 3 : 6 : 4
 - 4. 12 : 6 : 8

Question ID : 9895804603
Chosen Option : 1

Q.6 In a class there are total 70 students. The average weight of 26 girls is 28 kg and average weight of the remaining 1 students is 35 kg. What will be the average weight (in kg) of all 70 students?

- Ans
- 1. 32.4 kg
 - 2. 36.8 kg
 - 3. 35.2 kg
 - 4. 34.6 kg

Question ID : 9895804595
Chosen Option : 1

Q.6 A 250 metre long train takes 30 seconds to cross a 350 metres long bridge. How much time train will take to cross a 550 metre long bridge?

- Ans
- 1. 38 seconds
 - 2. 42 seconds
 - 3. 40 seconds
 - 4. 35 seconds

Question ID : 9895804610
Chosen Option : 3

Q.6 In an election between Ravi and Manoj, Ravi gets 61% of the total valid votes. If total votes were 25000 and 20% of the total votes were declared invalid, then other candidate Manoj get how much number of votes?

- Ans
- 1.

2. 7800

3. 9750

4. 8025

Question ID : 9895804599
Chosen Option : 2

Q.6 The price of two articles are in the ratio of 5 : 6 respectively. The price of first article is increased by 30% and the price of second article is decreased by $X\%$. If the new ratio is 13 : 11 respectively, then what is the value of X ?

Ans 1. 9.09

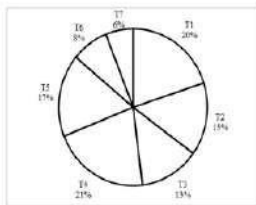
2. 8.33

3. 11.11

4. 12.5

Question ID : 9895804604
Chosen Option : 1

Q.6 The pie chart given below shows sale of different types of cars in a city for a given year. The total sale of cars in the city is 600000.



How many T4 cars are sold in the city for the given year?

Ans 1. 144000

2. 138000

3. 126000

4. 128000

Question ID : 9895804616
Chosen Option : 3

Q.6 The length and breadth of a rectangle is 16 cm and 12 cm. What will be the area of the rectangle?

Ans 1. 144 cm^2

2. 192 cm^2

3. 212 cm^2

4. 176 cm^2

Question ID : 9895804611
Chosen Option : 2

Q.6 M can complete a work in 14 days less than the time taken by L. If both M and L together can complete the same work in 24 days, then in how many days M alone can complete the same work?

Ans 1. 35 days

2. 56 days

3. 21 days

4. 42 days

Question ID : 9895804607

Chosen Option : 1

Q.6 U, V and W invest sum in the ratio of 15 : 20 : 27 respectively. If they earned total profit of ₹ 10230 at the end of year, then what is the share of V?

- Ans
- 1. ₹ 2870
 - 2. ₹ 3300
 - 3. ₹ 3150
 - 4. ₹ 3500

Question ID : 9895804602
Chosen Option : 2

Q.6 Mohan covers a distance of 187 km at the speed of S km/hr. If Mohan increases his speed by 6 km/hr, then he takes 6 hours less. What is the value of S ?

- Ans
- 1. 12 km/hr
 - 2. 14 km/hr
 - 3. 11 km/hr
 - 4. 13 km/hr

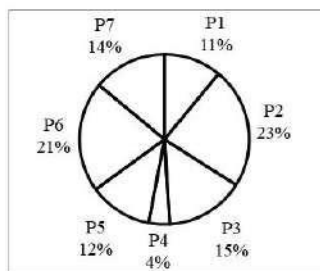
Question ID : 9895804609
Chosen Option : 3

Q.7 The radii of two circles are 15 cm and 8 cm. If the area of a third circle is equal to the sum of the areas of the two circles, then what will be the radius of the third circle?

- Ans
- 1. 17 cm
 - 2. 23 cm
 - 3. 21 cm
 - 4. 19 cm

Question ID : 9895804613
Chosen Option : 1

Q.7 The pie chart given below shows the imports of 7 different items P1, P2, P3, P4, P5, P6 and P7 as a percentage of total imports of a country.



Imports of item P6 is how much percent more than the imports of item P5?

- Ans
- 1. 75%
 - 2. 33%
 - 3. 80%
 - 4. 9%

Question ID : 9895804614
Chosen Option : 1

Q.7 P sells an article to Q at a loss of 5% and Q sells that article to R at a loss of 20%. If R pays ₹ 2812 for the article, then what was the cost price for P?

- Ans
- 1.

2. ₹ 3700

3. ₹ 3515

4. ₹ 3250

Question ID : 9895804600

Chosen Option : 4

Q.7 The average monthly expenditure of a family is ₹ 8160 for first 2 months, ₹ 12780 for next 5 months and ₹ 14280 for 5 months. If the family saves ₹ 66300 in the whole year, then what will be the average monthly income of the family?

Ans 1. ₹ 18000

2. ₹ 18160

3. ₹ 18100

4. ₹ 18260

Question ID : 9895804596

Chosen Option : 2

Q.7 The data below shows the number of students in class A and B having secured different marks.

4

Marks	Students in class A	Students in class B
0-2	3	2
2-4	4	1
4-6	1	3
6-8	1	1
8-10	1	1
10-12	0	2

What is the combined mean of A and B?

Ans 1. 3.75

2. 3.5

3. 4.7

4. 4

Question ID : 9895804598

Chosen Option : --

Q.7 What will be the Least Common Multiple of $2^2 \times 3^5 \times 7^3$ and $2^4 \times 3^4 \times 7^1$?

Ans 1. $2^2 \times 3^4 \times 7^1$

2. $2^6 \times 3^9 \times 7^4$

3. $2^4 \times 3^6 \times 7^4$

4. $2^4 \times 3^5 \times 7^3$

Question ID : 9895804592

Chosen Option : 4

Section : English Language

Q.1 Fill in the blanks with the most appropriate words.

Switch off the air conditioner _____ you will catch a cold.

Ans 1. or

2. but

3. and

4. so

Question ID : 9895804426
Chosen Option : 1

Q.2 Select the most appropriate synonym of the given word.

GULLIBLE

- Ans 1. Credulous
 2. Knowledgeable
 3. Innocent
 4. Perceptive

Question ID : 9895804411
Chosen Option : 1

Q.3 Select the most appropriate option to substitute the underlined segment in the given sentence. If there is no need to substitute it, select No improvement.

The state government has announced that it was giving financial helps to the economically weaker sections of society.

- Ans 1. will give financial help
 2. will give financial helps
 3. Gives financial helps
 4. No improvement.

Question ID : 9895804429
Chosen Option : 1

Q.4 Select the most appropriate antonym of the given word.

ABSURD

- Ans 1. guilty
 2. sensible
 3. sincere
 4. ridiculous

Question ID : 9895804413
Chosen Option : 3

Q.5 Select the most appropriate meaning of the given idiom.

At one's wits end

- Ans 1. To disagree with something
 2. Not knowing what to do
 3. Without aim or purpose
 4. To take note of something

Question ID : 9895804414
Chosen Option : 1

Q.6

Select the most appropriate word to fill in the blank.

If you kill us, the Emperor can attack your kingdom on the _____ of avenging our death.

- Ans
- 1. pretext
 - 2. excuse
 - 3. guise
 - 4. pretense

Question ID : 9895804421
Chosen Option : 2

Q.7 Select the most appropriate antonym of the given word.

ABUNDANT

- Ans
- 1. sufficient
 - 2. plentiful
 - 3. adequate
 - 4. scarce

Question ID : 9895804412
Chosen Option : 4

Comprehension:

In the following passage some words have been deleted. Fill in the blanks with the help of the alternatives given. Select the most appropriate option for each number.

The most common act of forgetfulness, I suppose (1) _____ in the matter of posting letters. So common is it that I am always (2) _____ to trust a departing visitor to post an important (3) _____. So before handing over the letter I make him (4) _____ to post it immediately. As for myself, anyone (5) _____ asks me to post a letter is a poor judge of my character.

SubQuestion No : 8

Q.8 Fill in blank (1) with the most appropriate option.

- Ans
- 1. develops
 - 2. creates
 - 3. occurs
 - 4. takes

Question ID : 9895804431
Chosen Option : 3

Comprehension:

In the following passage some words have been deleted. Fill in the blanks with the help of the alternatives given. Select the most appropriate option for each number.

The most common act of forgetfulness, I suppose (1) _____ in the matter of posting letters. So common is it that I am always (2) _____ to trust a departing visitor to post an important (3) _____. So before handing over the letter I make him (4) _____ to post it immediately. As for myself, anyone (5) _____ asks me to post a letter is a poor judge of my character.

SubQuestion No : 9

Q.9 Fill in blank (2) with the most appropriate option.

- Ans
- 1. willing
 - 2. frightened
 - 3. reluctant
 - 4. indifferent

Question ID : 9895804432
Chosen Option : 2

Comprehension:

In the following passage some words have been deleted. Fill in the blanks with the help of the alternatives given. Select the most appropriate option for each number.

The most common act of forgetfulness, I suppose (1) _____ in the matter of posting letters. So common is it that I am always (2) _____ to trust a departing visitor to post an important (3) _____. So before handing over the letter I make him (4) _____ to post it immediately. As for myself, anyone (5) _____ asks me to post a letter is a poor judge of my character.

SubQuestion No : 10

Q.10 Fill in blank (3) with the most appropriate option.

- Ans
- 1. message
 - 2. letter
 - 3. parcel
 - 4. mail

Question ID : 9895804433
Chosen Option : 2

Comprehension:

In the following passage some words have been deleted. Fill in the blanks with the help of the alternatives given. Select the most appropriate option for each number.

The most common act of forgetfulness, I suppose (1) _____ in the matter of posting letters. So common is it that I am always (2) _____ to trust a departing visitor to post an important (3) _____. So before handing over the letter I make him (4) _____ to post it immediately. As for myself, anyone (5) _____ asks me to post a letter is a poor judge of my character.

SubQuestion No : 11

Q.1
1 Fill in blank (4) with the most appropriate option.

- Ans
- 1. assure
 - 2. promise
 - 3. pledge
 - 4. ready

Question ID : 9895804434
Chosen Option : 1

Comprehension:

In the following passage some words have been deleted. Fill in the blanks with the help of the alternatives given. Select the most appropriate option for each number.

The most common act of forgetfulness, I suppose (1) _____ in the matter of posting letters. So common is it that I am always (2) _____ to trust a departing visitor to post an important (3) _____. So before handing over the letter I make him (4) _____ to post it immediately. As for myself, anyone (5) _____ asks me to post a letter is a poor judge of my character.

SubQuestion No : 12

Q.1
2 Fill in blank (5) with the most appropriate option.

- Ans
- 1. whom
 - 2. which
 - 3. that
 - 4. who

Question ID : 9895804435
Chosen Option : 1

Q.1
3 Select the correctly spelt word.

- Ans
- 1. Attendance
 - 2. Attendence
 - 3. Attandence
 - 4. Attandance

Question ID : 9895804416
Chosen Option : 1

Q.1
4 Select the most appropriate word to fill in the blank.

We need a _____ leader for the nation in these troubled times.

- Ans
- 1. gifted
 - 2. dynamic
 - 3. sturdy
 - 4. hard-core

Question ID : 9895804420
Chosen Option : 2

Q.1
5 Select the most appropriate option to substitute the underlined segment in the given sentence. If there is no need to substitute it, select No improvement.

Most of us fail to understand the objective of his frequent visits to this part of the country.

- Ans
- 1. No improvement.
 - 2. to understand the objectives to
 - 3. to understanding the objective of
 - 4. to understand the object of

Question ID : 9895804428
Chosen Option : 1

Q.1
6 Select the word which means the same as the group of words given.

One who collects stamps

- Ans
- 1. Numismatist
 - 2. Philatelist
 - 3. Philanthropist
 - 4. Plagiarist

Question ID : 9895804419
Chosen Option : 2

Q.1
7 Select the correctly spelt word.

- Ans
- 1. Beginning
 - 2. Begining
 - 3. Bigining
 - 4. Beggining

Question ID : 9895804417
Chosen Option : 1

Q.1
8 Identify the segment in the sentence which contains the grammatical error from the given options.

May I have your permission leaving the office a little early today?

- Ans
- 1. a little
 - 2. May I have
 - 3. early today

4. leaving

Question ID : 9895804424
Chosen Option : 1

Q.1 Identify the segment in the sentence which contains the grammatical error from the given options.

Even though I took a taxi, the train left before I reached the station.

- Ans
- 1. I reached
 - 2. took a taxi
 - 3. Even though
 - 4. the train left

Question ID : 9895804422
Chosen Option : 4

Q.2 Select the most appropriate synonym of the given word.

ELABORATE

- Ans
- 1. Sketchy
 - 2. Elongated
 - 3. Detailed
 - 4. Appropriate

Question ID : 9895804410
Chosen Option : 3

Q.2 Select the most appropriate meaning of the given idiom.

Hale and hearty.

- Ans
- 1. Happy
 - 2. Superior
 - 3. Healthy
 - 4. Friendly

Question ID : 9895804415
Chosen Option : 1

Q.2 Select the word which means the same as the group of words given.

Originating or occurring naturally in the place or country where found.

- Ans
- 1. Indigenous
 - 2. National
 - 3. Ingenious
 - 4. Ordinary

Question ID : 9895804418
Chosen Option : 1

Q.2
3 Fill in the blanks with the most appropriate words.

She has been reduced _____ a skeleton due to her illness.

- Ans
- 1. for
 - 2. with
 - 3. to
 - 4. in

Question ID : 9895804425
Chosen Option : 3

Q.2
4 Select the most appropriate option to substitute the underlined segment in the given sentence. If there is no need to substitute it, select No improvement.

There is no reason why you should remain tense when I was promising to help you.

- Ans
- 1. No improvement.
 - 2. I promised helping you
 - 3. I have promised to help you
 - 4. I promising to help you

Question ID : 9895804427
Chosen Option : 3

Q.2
5 Identify the segment in the sentence which contains the grammatical error from the given options.

We would be very pleased if you could come to my house.

- Ans
- 1. come to
 - 2. would be
 - 3. if you
 - 4. my house

Question ID : 9895804423
Chosen Option : --

Section : Hindi Language

Q.1 रिक्त स्थान को भरने के लिए उपयुक्त शब्द का चयन करें।

_____ ही बादल छाए, मोर नाचने लगा।

- Ans
- 1. जैसे
 - 2. किस
 - 3. कब
 - 4. वैसे

Question ID : 9895803909
Chosen Option : --

Q.2 दिए गए वाक्य का वह भाग ज्ञात करें जिसमें कोई त्रुटि है।

अपनी आय में से भावी जीवन के लिए कुछ अंश बचाकर रखनी बचत कहलाता है।

Ans

1. कुछ अंश बचाकर रखनी
2. भावी जीवन के लिए
3. अपनी आय में से
4. बचत कहलाता है।

Question ID : 9895803902
Chosen Option : --

Q.3 रिक्त स्थान को भरने के लिए उपयुक्त शब्द का चयन करें।

चारों ओर रंग ही रंग _____ गए।

- Ans
1. बौखला
 2. बिखर
 3. मुरझा
 4. भाग

Question ID : 9895803908
Chosen Option : --

Q.4 रिक्त स्थान को भरने के लिए उपयुक्त शब्द का चयन करें।

किसान हल _____ खेत की ओर जा रहा है।

- Ans
1. तोड़कर
 2. लेकर
 3. मारकर
 4. धक्का देकर

Question ID : 9895803906
Chosen Option : --

Q.5 निम्नलिखित में से उस विकल्प का चयन करें जो ' छाती पर मूँग दलना ' मुहाबरे का अर्थ व्यक्त करता है।

- Ans
1. छाती से मूँग पीसना
 2. दली हुई मूँग को छाती पर रखना
 3. दुख देना
 4. सुख देना

Question ID : 9895803920
Chosen Option : --

Q.6 दिए गए वाक्य में रेखांकित खंड को प्रतिस्थापित करने के लिए उपयुक्त विकल्प का चयन करें।

आदर्श बालक सुबह उठकर अपनी माता-पिता को प्रणाम करते हैं।

- Ans
1. अपने माता-पिता को
 2. उसके माता-पिता को

3. अपना माता-पिता को
 4. हमारे माता-पिता को

Question ID : 9895803903
Chosen Option : --

Q.7 निम्नलिखित में से उस विकल्प का चयन करें जो ' जमीन आसमान एक करना ' मुहावरे का अर्थ व्यक्त करता है।

- Ans 1. बहुत अधिक परिश्रम करना
 2. जमीन को आसमान तक ले जाना
 3. कम परिश्रम करना
 4. जमीन और आसमान को मिलाना

Question ID : 9895803921
Chosen Option : --

Q.8 सही वर्तनी वाले शब्द का चयन करें।

- Ans 1. तटस्थ
 2. टतस्थ
 3. तटष्ठ
 4. ततष्ठ

Question ID : 9895803925
Chosen Option : --

Q.9 दिए गए वाक्य में रेखांकित खंड को प्रतिस्थापित करने के लिए उपयुक्त विकल्प का चयन करें।

दादाजी मोटियाँ रोटियाँ नहीं खाते।

- Ans 1. रोटियाँ मोटियाँ
 2. मोटी रोटियाँ
 3. मोटे रोटियाँ
 4. मोटा रोटी

Question ID : 9895803905
Chosen Option : --

Q.10 दिए गए वाक्य में रेखांकित खंड को प्रतिस्थापित करने के लिए उपयुक्त विकल्प का चयन करें।

व्यक्ति को अपना जीवन सफल बनाने के लिए आशा पर सहारा लेना चाहिए।

- Ans 1. आशाओं ने सहारा
 2. आशा का सहारा
 3. आशा के सहारा
 4. आशा की सहारा

Question ID : 9895803904
Chosen Option : --

दिए गए शब्द का विलोम चुनें।

स्थूल

- Ans
- 1. अस्थिर
 - 2. अग्रज
 - 3. स्थिर
 - 4. सूक्ष्म

Question ID : 9895803916
Chosen Option : --

Q.1
2 दिये गये वाक्यांश के लिए एक शब्द दीजिये।

जो कुछ न जानता हो

- Ans
- 1. मर्मज्ञ
 - 2. सर्वज्ञ
 - 3. अल्पज्ञ
 - 4. अज्ञ

Question ID : 9895803922
Chosen Option : --

Q.1
3 दिए गए शब्द के पर्यायवाची शब्द का चयन करें।

गंगा

- Ans
- 1. भागीरथी
 - 2. तटिनी
 - 3. नदी
 - 4. यमुना

Question ID : 9895803919
Chosen Option : --

Q.1
4 दिए गए शब्द के पर्यायवाची शब्द का चयन करें।

बादल

- Ans
- 1. पर्वत
 - 2. पानी
 - 3. पयोधर
 - 4. पवन

Question ID : 9895803918
Chosen Option : --

दिये गये वाक्यांश के लिए एक शब्द दीजिये।

जो मास में एक बार होता हो

- Ans
- 1. वार्षिक
 - 2. मासिक
 - 3. पाक्षिक
 - 4. साप्ताहिक

Question ID : 9895803923
Chosen Option : --

Q.1
6 सही वर्तनी वाले शब्द का चयन करें।

- Ans
- 1. प्रियदरसी
 - 2. प्रियदर्शि
 - 3. प्रियदर्शी
 - 4. प्रियदर्षी

Question ID : 9895803924
Chosen Option : --

Q.1
7 दिए गए वाक्य का वह भाग ज्ञात करें जिसमें कोई त्रुटि है।

लक्ष्यहीन मनुष्य जिंदगियों में कभी सार्थक कार्य नहीं कर सकता।

- Ans
- 1. जिंदगियों में कभी
 - 2. नहीं कर सकता।
 - 3. सार्थक कार्य
 - 4. लक्ष्यहीन मनुष्य

Question ID : 9895803900
Chosen Option : --

Q.1
8 दिए गए शब्द का विलोम चुनें।

अज्ञ

- Ans
- 1. विज्ञ
 - 2. आज्ञा
 - 3. आस्था
 - 4. अनुज्ञ

Question ID : 9895803917
Chosen Option : --

Q.1
9

रिक्त स्थान को भरने के लिए उपयुक्त शब्द का चयन करें।

में _____ को परेशान नहीं करूँगा।

Ans

1. कोई
- ✗ 2. कभी
- ✗ 3. कुछ
- ✗ 4. किसी

Question ID : 9895803907
Chosen Option : --

Comprehension:

निम्नलिखित गद्यांश के रिक्त स्थानों की पूर्ति गद्यांश के नीचे दिए गए प्रश्नों के अनुसार कीजिए -

संसार के सभी _____ (1) करुणा के सागर थे। गौतम बुद्ध ने राजपाट और सांसारिकता को _____ (2) ही महानता को प्राप्त किया। गांधीजी ने वकालत छोड़कर देश को _____ (3) कराने के लिए लड़ाई छेड़ दी। ईसा मसीह ने _____ (4) में अपने _____ (5) की आहुति दी।

SubQuestion No : 20

Q.2
0 गद्यांश में संकेतित रिक्त स्थान (1) के लिए उपयुक्त शब्द होगा

Ans

- ✓ 1. महापुरुष
- ✗ 2. नेता
3. विद्वान
- ✗ 4. राजा

Question ID : 9895803911
Chosen Option : --

Comprehension:

निम्नलिखित गद्यांश के रिक्त स्थानों की पूर्ति गद्यांश के नीचे दिए गए प्रश्नों के अनुसार कीजिए -

संसार के सभी _____ (1) करुणा के सागर थे। गौतम बुद्ध ने राजपाट और सांसारिकता को _____ (2) ही महानता को प्राप्त किया। गांधीजी ने वकालत छोड़कर देश को _____ (3) कराने के लिए लड़ाई छेड़ दी। ईसा मसीह ने _____ (4) में अपने _____ (5) की आहुति दी।

SubQuestion No : 21

Q.2
1 गद्यांश में संकेतित रिक्त स्थान (2) के लिए उपयुक्त शब्द होगा

- Ans
- 1. देकर
 - 2. भूलकर
 - 3. त्याग कर
 - 4. लेकर

Question ID : 9895803912
Chosen Option : --

Comprehension:

निम्नलिखित गद्यांश के रिक्त स्थानों की पूर्ति गद्यांश के नीचे दिए गए प्रश्नों के अनुसार कीजिए -

संसार के सभी _____ (1) करुणा के सागर थे। गौतम बुद्ध ने राजपाट और सांसारिकता को _____ (2) ही महानता को प्राप्त किया। गांधीजी ने वकालत छोड़कर देश को _____ (3) कराने के लिए लड़ाई छेड़ दी। ईसा मसीह ने _____ (4) में अपने _____ (5) की आहुति दी।

SubQuestion No : 22

Q.2
2 गद्यांश में संकेतित रिक्त स्थान (3) के लिए उपयुक्त शब्द होगा

- Ans
- 1. स्वतंत्र
 - 2. अराजक

3. स्वछन्द

4. परतंत्र

Question ID : 9895803913
Chosen Option : --

Comprehension:

निम्नलिखित गद्यांश के रिक्त स्थानों की पूर्ति गद्यांश के नीचे दिए गए प्रश्नों के अनुसार कीजिए -

संसार के सभी _____ (1) करुणा के सागर थे। गौतम बुद्ध ने राजपाट और सांसारिकता को _____ (2) ही महानता को प्राप्त किया। गांधीजी ने वकालत छोड़कर देश को _____ (3) कराने के लिए लड़ाई छेड़ दी। ईसा मसीह ने _____ (4) में अपने _____ (5) की आहुति दी।

SubQuestion No : 23

Q.2
3 गद्यांश में संकेतित रिक्त स्थान (4) के लिए उपयुक्त शब्द होगा

- Ans
- 1. जनहित
 - 2. आत्महित
 - 3. स्वहित
 - 4. मनहित

Question ID : 9895803914
Chosen Option : --

Comprehension:

SubQuestion No : 24

Q.2
4 गद्यांश में संकेतित रिक्त स्थान (5) के लिए उपयुक्त शब्द होगा

- Ans
- 1. धन-धान्य
 - 2. सपनों
 - 3. प्राणों
 - 4. विचारों

Question ID : 9895803915
Chosen Option : --

Q.2
5 दिए गए वाक्य का वह भाग ज्ञात करें जिसमें कोई त्रुटि है।

जिसके जैसी संस्कार होंगे वैसी ही उसकी भाषा होगी।

- Ans
- 1. भाषा होगी।
 - 2. वैसी ही उसकी
 - 3. जिसके जैसी
 - 4. संस्कार होंगे

Question ID : 9895803901
Chosen Option : --