

Constable (GD) in CAPFs, NIA, SSF and Rifleman (GD) in Assam Rifles Examination, 2018

Roll No. :	
Registration No.	
Name :	
Exam Venue :	
Exam Time :	9:00 AM - 10:30 AM
Exam Date :	14/02/2019

Section : General Section





Q.1 J, K, L, M, N and O are six teachers. Each one teaches a different subject out of Hindi, English, Math, Science, Social Science and Arts, not necessarily in the same order. Each of them teaches on only one day, from Monday to Saturday, not necessarily in the same order. J teaches Arts on Saturday. L teaches neither English nor Social Science, but he teaches on Thursday. Wednesday is reserved for Maths taught by K. O teaches Science a day before N. Social Science is taught a day before Arts. Which subject is taught on the day between Science and Math?

- Ans
- 1. Hindi
 - 2. Arts
 - 3. Science
 - 4. English

Question ID : 9895802836
Chosen Option : 4

Q.2 Choose the option that most closely resembles the mirror image of the given word when the mirror is placed at the right side.




UPRIGHT

- Ans
- 1. 
 - 2. 
 - 3. 
 - 4. 

Question ID : 9895802848
Chosen Option : 2

Q.3 Select a figure from amongst the four alternatives that when placed in the blank space (?) of figure X will complete the pattern. (Rotation is not allowed).



- Ans
- 1. 
 - 2. 
 - 3. 



Question ID : 9895802846
Chosen Option : 1

Q.4 Select the option that is related to the third term in the same way as the second term is related to the first term.

Chapter: Book : : Arc : ?

- Ans 1. Cube
 2. Triangle
 3. Square
 4. Circle

Question ID : 9895802830
Chosen Option : 4

Q.5 A square transparent sheet with a pattern is given. How will the pattern appear when the transparent sheet is folded along the dotted line?



- Ans 1.
- 2.
- 3.
- 4.

Question ID : 9895802849
Chosen Option : 2

Q.6 Select the option that will correctly replace the question mark (?) in the series.

16, 20, 36, 72, ?

- Ans 1. 126
 2. 116
 3. 136
 4. 146

Question ID : 9895802840
Chosen Option : 3

Q.7 Eight friends A, B, C, D, E, F, G and H are sitting around a circular table facing each other for a lunch. A is opposite F and third to the right of B. G is between F and D. H is to the left of D. E is between C and A. Who is sitting fourth to the left of A?

- Ans 1. D
 2. B
 3. F
 4. C

Question ID : 9895802835
Chosen Option : 3

Q.8 Select the option that is related to the third term in the same way as the second term is related to the first term.

Proud : Haughty :: Fallacy : ?

- Ans 1. Ego
 2. War
 3. Fall
 4. Illusion

Question ID : 9895802829
Chosen Option : 4

Q.9 Select the option that is related to the third number in the same way as the second number is related to the first number.

32 : 256 :: 16 : ?

- Ans 1. 128
 2. 122
 3. 144
 4. 66

Question ID : 9895802841
Chosen Option : 1

Q.1
0 Choose the odd one out of the given options.

- Ans 1. Ottawa
 2. Thimphu
 3. Beijing
 4. Chile

Question ID : 9895802828
Chosen Option : 4

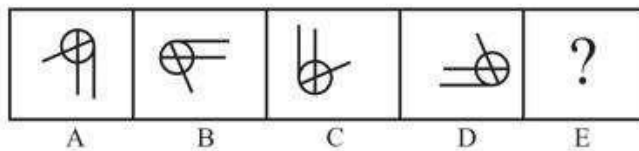
Q.1
1 In a certain code, BICYCLE is written as 59. How will WINDOW be written in that code?

- Ans 1. 88
 2. 91
 3. 89
 4. 77

Question ID : 9895802833
Chosen Option : 1

Q.1
2

Choose the option that would follow next in the given figure series.

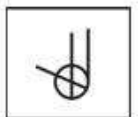


Ans

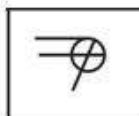
✓ 1.



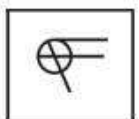
✗ 2.



✗ 3.



✗ 4.



Question ID : 9895802845
Chosen Option : 1

Q.1 Select the option that will correctly replace the question mark (?) in the series.

8, 19, 41, 74, ?

Ans

✗ 1. 108

✗ 2. 98

✓ 3. 118

✗ 4. 128

Question ID : 9895802839
Chosen Option : 3

Q.1 Choose the odd one out of the given options.

Ans

✗ 1. ILP

✓ 2. JHU

✗ 3. FJU

✗ 4. THI

Question ID : 9895802827
Chosen Option : 2

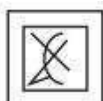
Q.1 Choose the option in which the figure marked 'X' is embedded. (Rotation is not allowed)

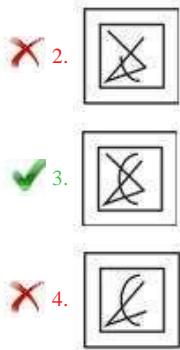


X

Ans

✗ 1.





Question ID : 9895802847
Chosen Option : 3

Q.1 Choose the odd number out of the given options.

- Ans 1. 651
2. 571
3. 561
4. 471

Question ID : 9895802842
Chosen Option : 2

Q.1 In a certain code, BOTANY is written as OBATYN. How will OOLOGY be written in that code?

- Ans 1. OOOLGY
2. OLOOYG
3. OOLOYG
4. OOOLYG

Question ID : 9895802832
Chosen Option : 4

Q.1 The statements below are followed by two conclusions labeled I and II. Assuming that the information in the statements is true, even if it appears at variance with generally established facts, decide which conclusion(s) logically and definitely follow(s) from the information given in the statements.

Statements:

- 1) Some forces are volumes.
- 2) Some currents are volumes.

Conclusion:

- I. Some volumes are forces.
- II. Some volumes are currents.

- Ans 1. Only conclusion II follows.
2. Neither conclusion I nor conclusion II follows.
3. Both conclusions follow.
4. Only conclusion I follows.

Question ID : 9895802838
Chosen Option : 3

The statements below are followed by two conclusions labeled I and II. Assuming that the information in the statements is true, even if it appears at variance with generally established facts, decide which conclusion(s) logically and definitely follow(s) from the information given in the statements.

Statements:

- 1) Some wines are chairs.
- 2) All chairs are drums.

Conclusion

- I. All chairs are wines.
- II. Some drums are wines.

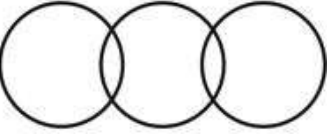

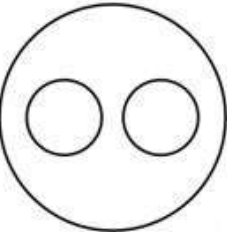
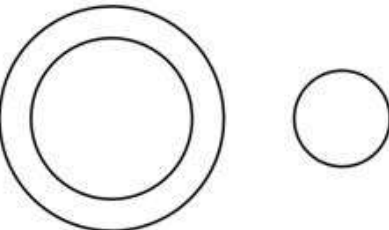
- Ans
1. Either conclusion I or conclusion II follows.
 2. Only conclusion I follows.
 3. Only conclusion II follows.
 4. Both conclusions follow.

Question ID : 9895802837
Chosen Option : 3

Q.2
0 Select the Venn diagram that best represents the given set of classes.

Currencies, Yuan, Baht

Ans

1. 
2. 
3. 
4. 

Question ID : 9895802850
Chosen Option : 3

Q.2
1

Seven friends O, P, Q, R, S, T and U are watching a movie sitting in a row. S is sitting at one extreme end. Q is sitting second to the right of S. P is sitting between O and Q. U is not sitting at any extreme end. R is sitting to the left of T. Who is sitting between S and Q?

- 1. U
- 2. R
- 3. O
- 4. P

Question ID : 9895802834
Chosen Option : 3

Q.2 Select the option that will correctly replace the question mark (?) in the series.

RMB, POZ, NQX, LSV, ?

- Ans
- 1. JUT
 - 2. JVT
 - 3. JUS
 - 4. JVS

Question ID : 9895802826
Chosen Option : 1

Q.2 Find out the two signs to be interchanged to make the following equation correct.

$$21 + 5 \times 2 - 21 \div 3 = 12$$

- Ans
- 1. + and -
 - 2. - and \div
 - 3. - and \times
 - 4. \times and \div

Question ID : 9895802844
Chosen Option : 3

Q.2 Select the option that will correctly replace the question mark (?) in the given pattern.

6	7	9
3	4	?
27	33	65

- Ans
- 1. 4
 - 2. 5
 - 3. 11
 - 4. 13

Question ID : 9895802843
Chosen Option : 3

Q.2 Select the option that is related to the third term in the same way as the second term is related to the first term.

GKM : FIO :: EIK : ?

- Ans
- 1. DGN
 - 2. DFM
 - 3. DGM

4. DHM

Question ID : 9895802831
Chosen Option : 3

Q.2
6 Ashoka appointed religious officials, known as:

- Ans 1. Dhamma-mahamatta
 2. Dhammadhiraja
 3. Dhammadhikari
 4. Dhammadhyaksha

Question ID : 9895802886
Chosen Option : 1

Q.2
7 Bank rate is decided by which of the following agencies?

- Ans 1. Securities and Exchange Board of India
 2. Reserve Bank of India
 3. State Bank of India
 4. Ministry of Finance

Question ID : 9895802895
Chosen Option : 2

Q.2
8 The cabinet has raised the Minimum Support Price of wheat for 2018-19 by:

- Ans 1. ₹ 105 per quintal
 2. ₹ 202 per quintal
 3. ₹ 309 per quintal
 4. ₹ 600 per quintal

Question ID : 9895802896
Chosen Option : 1

Q.2
9 In which year was the Earth summit of Rio de Janeiro held?

- Ans 1. 1991
 2. 1993
 3. 1992
 4. 1990

Question ID : 9895802889
Chosen Option : 3

Q.3
0 Pandit Bhimsen Joshi is associated with which tradition of classical music?

- Ans 1. Qawwali
 2. Thumri
 3. Carnatic
 4. Hindustani

Question ID : 9895802885
Chosen Option : 4

Q.3
1 Muscle cramp is caused by:

- Ans
- 1. water loss during sweating
 - 2. fatiguing muscles respiring aerobically
 - 3. increased blood circulation
 - 4. accumulation of lactic acid

Question ID : 9895802880
Chosen Option : 4

Q.3
2 Which of the following languages is NOT a part of the Eighth Schedule of the Constitution?

- Ans
- 1. Dogri
 - 2. Bodo
 - 3. Persian
 - 4. Santhal

Question ID : 9895802892
Chosen Option : 3

Q.3
3 Which of the following is NOT in the jurisdiction of the Supreme Court of India?

- Ans
- 1. Appellate
 - 2. Original
 - 3. Advisory
 - 4. Financial

Question ID : 9895802893
Chosen Option : 4

Q.3
4 The percolation rate of water is the least in _____ soil.

- Ans
- 1. clayey
 - 2. sandy
 - 3. gravel
 - 4. loamy

Question ID : 9895802879
Chosen Option : 4

Q.3
5 The Jnanpith Award is given for excellence in which of the following fields?

- Ans
- 1. Medicine
 - 2. Social work
 - 3. Literature
 - 4. Cinema

Question ID : 9895802900
Chosen Option : 3

Q.3
6 The 2018 Commonwealth Games were held in:

- Ans
- 1. Gold Coast
 - 2. London
 - 3. Doha
 - 4. Brazil

Question ID : 9895802882

Chosen Option : 1

Q.3
7 Which one of the following countries is NOT a member of the BASIC grouping?

- Ans
- 1. South Africa
 - 2. China
 - 3. Brazil
 - 4. Kenya

Question ID : 9895802899

Chosen Option : 4

Q.3
8 The 86th Constitution Amendment Act, 2002 inserted which of the following articles in the Constitution of India?

- Ans
- 1. 21-A
 - 2. 39-A
 - 3. 20-A
 - 4. 56-C

Question ID : 9895802894

Chosen Option : 1

Q.3
9 निम्नलिखित में से कौन सा विरासत स्थल वास्तुकला की बेहतरीन द्रविड़ शैली को दर्शाता है?

- Ans
- 1. कोणार्क
 - 2. बोध गया
 - 3. अक्षरधाम
 - 4. हम्पी

Question ID : 9895802884

Chosen Option : 4

Q.4
0 _____ was the founder of the Shuddhi Movement.

- Ans
- 1. Swami Dayanand Saraswati
 - 2. Swami Vivekananda
 - 3. Ishwar Chandra Vidyasagar
 - 4. Raja Ram Mohan Roy

Question ID : 9895802888

Chosen Option : 3

Q.4
1 Which among the following CANNOT be used as indicators?

- Ans
- 1. China Rose
 - 2. Phenolphthalein
 - 3. Common salt
 - 4. Turmeric

Question ID : 9895802877
Chosen Option : 3

Q.4
2 The Nagarjuna Sagar Dam is built across the river:

- Ans
- 1. Pamba
 - 2. Mahanadi
 - 3. Krishna
 - 4. Cauvery

Question ID : 9895802890
Chosen Option : 3

Q.4
3 The Jataka tales are associated with which of the following sects?

- Ans
- 1. Lingayat
 - 2. Shaivism
 - 3. Jainism
 - 4. Buddhism

Question ID : 9895802887
Chosen Option : 4

Q.4
4 Mirabai Chann won a Gold medal at which of the following events held in Anaheim, United States?

- Ans
- 1. World Snooker Championships
 - 2. World Archery Championships
 - 3. World Weightlifting Championships
 - 4. World Tennis Championships

Question ID : 9895802881
Chosen Option : 3

Q.4
5 _____ refers to a deposit into a bank account or a financial institution with no specified maturity date.

- Ans
- 1. demand deposit
 - 2. fixed deposit
 - 3. recurring deposit
 - 4. current deposit

Question ID : 9895802897
Chosen Option : 4

Q.4
6 The 'Gol Gumbaz' is located in:

- Ans
- 1.

- 2. Bidar
- 3. Daulatabad
- 4. Hyderabad

Question ID : 9895802883
Chosen Option : 1

Q.4
7 According to Census 2011, _____ has the highest literacy rate.

- Ans
- 1. Mizoram
 - 2. Goa
 - 3. Kerala
 - 4. Karnataka

Question ID : 9895802891
Chosen Option : 3

Q.4
8 'Adopt a Heritage: Apni Dharohar, Apni Pehchaan', is the initiative of _____.

- Ans
- 1. Indian Council of Historical Research
 - 2. Ministry of Tourism
 - 3. Archaeological Survey of India
 - 4. Ministry of Culture

Question ID : 9895802898
Chosen Option : 4

Q.4
9 Land and sea breeze are caused due to _____.

- Ans
- 1. convection
 - 2. acclimatisation
 - 3. radiation
 - 4. conduction

Question ID : 9895802878
Chosen Option : 1

Q.5
0 What is the role of mucus secreted by the stomach?

- Ans
- 1. To protect the lining of the stomach
 - 2. To digest fats
 - 3. To kill the germs in the food
 - 4. To digest the proteins

Question ID : 9895802876
Chosen Option : 3

Q.5
1 P, Q and R can complete a work in 30 days, 15 days and 20 days respectively. P works on first day, then Q works on second day and then R works on third day and so on. In how many days the work will be completed?

- Ans
- 1. 20 days
 - 2. 21 days

3. 22 days

4. 19 days

Question ID : 9895804633

Chosen Option : 1

Q.5 If length, breadth and height of cuboids are increases by 10%, 20% and 15% respectively, then what will be the percentage change in its volume?

Ans 1. 47.4%

2. 45%

3. 51.8%

4. 54.2%

Question ID : 9895804624

Chosen Option : 1

Q.5 What is the value of $\left(24 \div 4 - \frac{2}{3} \text{ of } \frac{21}{8} \div \frac{1}{4}\right)$?

Ans 1. -1

2. $-\frac{96}{15}$

3. $\frac{91}{16}$

4. -8

Question ID : 9895804618

Chosen Option : 1

Q.5 If the average of five consecutive odd numbers is 17, then what will be the highest number among them?

Ans 1. 21

2. 25

3. 19

4. 23.5

Question ID : 9895804620

Chosen Option : 1

Q.5 The length of a rectangle is 24 cm. If the length of diagonal is 26 cm, then what will be the breadth of the rectangle?

Ans 1. 12 cm

2. 14 cm

3. 15 cm

4. 10 cm

Question ID : 9895804636

Chosen Option : 4

Q.5 If selling price of an article is ₹ 432 and profit is 35%, then what will be the cost price of the article?

Ans 1. ₹ 480.40

2. ₹ 320

3. ₹ 583.20

✗ 4. ₹ 368

Question ID : 9895804625

Chosen Option : 2

Q.5 A train covers a certain distance at a speed of 45 m/s in 15 minutes. How much time it will take to cover the same
7 distance at the speed of 60 m/s?

- Ans
- ✗ 1. 3.25 minutes
 - ✗ 2. 4.75 minutes
 - ✗ 3. 6.75 minutes
 - ✓ 4. 11.25 minutes

Question ID : 9895804635

Chosen Option : 4

Q.5 What is average of 410, 475, 525, 560 and 720?
8

- Ans
- ✗ 1. 561
 - ✗ 2. 542
 - ✓ 3. 538
 - ✗ 4. 526

Question ID : 9895804621

Chosen Option : 3

Q.5 The diagonal of a square is 10 cm. What will be the length of the diagonal of the square whose area is double of the area
9 of first square?

- Ans
- ✓ 1. $10\sqrt{2}$ cm
 - ✗ 2. $8\sqrt{2}$ cm
 - ✗ 3. $20\sqrt{2}$ cm
 - ✗ 4. 20 cm

Question ID : 9895804638

Chosen Option : 1

Q.6 What will be the difference between the compound interest (interest is compounded annually) and simple interest on a
0 sum of ₹ 6400 at the rate of 10% per annum for 2 years?

- Ans
- ✗ 1. ₹ 90
 - ✗ 2. ₹ 72
 - ✗ 3. ₹ 128
 - ✓ 4. ₹ 64

Question ID : 9895804631

Chosen Option : 4

Q.6 दो वृत्तों की त्रिज्याएँ 20 से.मी. तथा 15 से.मी. हैं। यदि एक तीसरे वृत्त का क्षेत्रफल दोनों वृत्तों के क्षेत्रफल के योग
1 के बराबर है, तो तीसरे वृत्त की त्रिज्या क्या होगी?

- Ans
- ✗ 1. 35 से.मी.
 - ✗ 2. 22 से.मी.
 - ✗ 3. 27 से.मी.
 - ✓ 4. 25 से.मी.

Question ID : 9895804637
Chosen Option : 4

Q.6 A sum of ₹ 3460 is lent at simple interest. If the rate of interest is 5% per annum, then what will be the simple interest for 5 years?

- Ans
- 1. ₹ 875
 - 2. ₹ 865
 - 3. ₹ 855
 - 4. ₹ 845

Question ID : 9895804630
Chosen Option : 2

Q.6 What is the value of

$$\frac{5}{4} \text{ of } \frac{12}{5} \div \frac{4}{25} + \frac{1}{2} \times \frac{3}{4}?$$

- Ans
- 1. $\frac{149}{4}$
 - 2. $\frac{153}{8}$
 - 3. $\frac{149}{8}$
 - 4. $\frac{153}{16}$

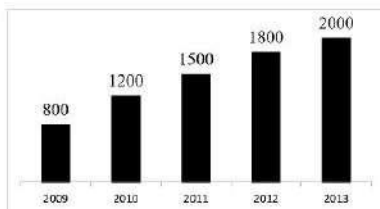
Question ID : 9895804619
Chosen Option : 2

Q.6 What will be the ratio of Highest common Factor and Least Common Multiple of two numbers 14 and 18?

- Ans
- 1. 1 : 49
 - 2. 1 : 27
 - 3. 1 : 21
 - 4. 1 : 63

Question ID : 9895804617
Chosen Option : 4

Q.6 The bar chart given below shows the annual production (in 1000 tonnes) of coffee of a country for years 2009 to 2013.

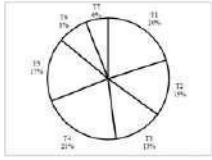


What is the percentage increase in the production of coffee in the year 2011 as compared to year 2010?

- Ans
- 1. 20%
 - 2. 27.5%
 - 3. 25%
 - 4. 32.5%

Question ID : 9895804641

Q.6 The pie chart given below shows sale of different types of cars in a city for a given year. The total sale of cars in the city is 600000.



What is the sum of total number of cars sold of type T5, T6 and T3?

- Ans
- 1. 232000
 - 2. 228000
 - 3. 245000
 - 4. 252000

Question ID : 9895804640

Chosen Option : 2

Q.6 If two successive discounts of 25% and 20% respectively are given, then what will be the net discount percentage?

- Ans
- 1. 42.5%
 - 2. 45%
 - 3. 50%
 - 4. 40%

Question ID : 9895804622

Chosen Option : 4

Q.6 What is the mean of the given data?

23, 24, 25, 26, 27, 28, 29, 30, 31, 32

- Ans
- 1. 26.75
 - 2. 27.69
 - 3. 27.5
 - 4. 26.12

Question ID : 9895804623

Chosen Option : 3

Q.6 A alone can complete a work in 10 days and B alone can complete the same work in 20 days. In how many days both A and B together can complete half of the total work?

- Ans
- 1. $\frac{40}{3}$ days
 - 2. $\frac{20}{3}$ days
 - 3. $\frac{10}{3}$ days
 - 4. $\frac{25}{3}$ days

Question ID : 9895804632

Chosen Option : 3

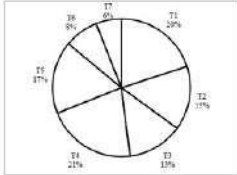
Q.7 P and Q starts a business with investment of ₹ 28000 and ₹ 42000 respectively. P invests for 8 months and Q invests for one year. If the total profit at the end of the year is ₹ 21125, then what is the share of P?

Ans

- 1. ₹ 12625
- 2. ₹ 14625
- 3. ₹ 6500
- 4. ₹ 8750

Question ID : 9895804629
Chosen Option : 3

Q.7 The pie chart given below shows sale of different types of cars in a city for a given year. The total sale of cars in the city is 600000.



What is the difference in the number of cars sold of type T5 and T1?

- Ans
- 1. 21000
 - 2. 24000
 - 3. 18000
 - 4. 27000

Question ID : 9895804639
Chosen Option : 3

Q.7 Four numbers are in the ratio of 3 : 1 : 7 : 5 respectively. If the sum of these four numbers is 336, then what is the sum of first and fourth number?

- Ans
- 1. 152
 - 2. 172
 - 3. 168
 - 4. 146

Question ID : 9895804627
Chosen Option : 3

Q.7 A train is moving at the speed of 20 m/s. If the length of train is 540 metres, then how much time will it take to cross a pole?

- Ans
- 1. 108 seconds
 - 2. 81 seconds
 - 3. 27 seconds
 - 4. 54 seconds

Question ID : 9895804634
Chosen Option : 3

Q.7 The ratio of number of children, women and men in a colony is 6 : 4 : 3 respectively and the colony has at least 200 members. What could be the minimum number of women in the colony?

- Ans
- 1. 75
 - 2. 80
 - 3. 64
 - 4. 20

Question ID : 9895804628
Chosen Option : 3

Q.7 A person purchases bags at the rate of ₹ 128 per bag. If he sells bags on 20% profit, then what will be the selling price of 15 bags?

- Ans
- 1. ₹ 1600
 - 2. ₹ 2304
 - 3. ₹ 2194
 - 4. ₹ 1886

Question ID : 9895804626
Chosen Option : 2

Section : English Language

Q.1 Select the most appropriate option to substitute the underlined segment in the given sentence. If there is no need to substitute it, select No Improvement.

My favourite novelist in all was Charles Dickens, who really left his mark on me.

- Ans
- 1. No improvement
 - 2. My favourite novelist of all
 - 3. My favourite novelist between all
 - 4. My favourite novelist at all

Question ID : 9895804440
Chosen Option : 2

Q.2 From the given options, identify the segment in the sentence which contains the grammatical error.

The man greeted his secretary and told her that he need her help to complete the work immediately.

- Ans
- 1. to complete the work
 - 2. told her that
 - 3. he need her help
 - 4. greeted his secretary

Question ID : 9895804438
Chosen Option : 3

Q.3 Select the most appropriate option to substitute the underlined segment in the given sentence. If there is no need to substitute it, select No Improvement.

Meeting my teacher after ten years was an unforgotten moment that I will always treasure.

- Ans
- 1. a forgotten moment
 - 2. an unforgettable moment
 - 3. the unforgotten moment
 - 4. No improvement

Question ID : 9895804441
Chosen Option : 2

Q.4 Select the most appropriate word to fill in the blank.

Smoking is _____ to health.

- Ans
- 1. tedious
 - 2. serious

- 3. anxious
- 4. injurious

Question ID : 9895804460
Chosen Option : 4

Q.5 Select the antonym of the given word.

STINGY

- Ans
- 1. Generous
 - 2. Skinny
 - 3. Cheap
 - 4. Mean

Question ID : 9895804452
Chosen Option : 1

Q.6 Select the most appropriate word to fill in the blank.

Let us _____ our heads together to solve the problem.

- Ans
- 1. join
 - 2. put
 - 3. bring
 - 4. combine

Question ID : 9895804461
Chosen Option : 2

Q.7 Select the option that means the same as the given idiom.

To see eye to eye

- Ans
- 1. To agree with another
 - 2. To love another
 - 3. To threaten another
 - 4. To fight with another

Question ID : 9895804455
Chosen Option : 1

Q.8 Select the correctly spelt word.

- Ans
- 1. Acheive
 - 2. Achieve
 - 3. Acheeve
 - 4. Achiev

Question ID : 9895804459
Chosen Option : 2

Q.9

Select the most appropriate option to fill in the blank.

In the United States of America two dozen people _____ due to the present cold wave.

- Ans 1. have been killed
 2. are being killed
 3. has killed
 4. has been killed

Question ID : 9895804442
Chosen Option : 4

Q.1 Select the most appropriate option to substitute the underlined segment in the given sentence. If there is no need to substitute it, select No Improvement.

When you go by rail, make sure taking the express train that stops only at big stations.

- Ans 1. make sure to taking
 2. No improvement
 3. make sure to take
 4. making sure to take

Question ID : 9895804439
Chosen Option : 1

Q.1 Select the most appropriate option to fill in the blank.

I think that childhood is a time when there are _____ ways to make life enjoyable.

- Ans 1. many
 2. less
 3. little
 4. more

Question ID : 9895804443
Chosen Option : 1

Q.1 From the given options, identify the segment in the sentence which contains the grammatical error.

After finishing his tiring game, Rohan leaned by the wall.

- Ans 1. his game
 2. Rohan leaned
 3. After finishing
 4. by the wall

Question ID : 9895804437
Chosen Option : 4

Q.1 Select the synonym of the given word.

IMPECCABLE

- Ans 1. Imperfect
 2. Flawless
 3. Smooth

4. Clean

Question ID : 9895804450
Chosen Option : 2

Q.1
4 Select the option that means the same as the given idiom.

To have the gift of the gab

- Ans 1. To be eloquent
 2. To be intelligent
 3. To be boastful
 4. To be gifted

Question ID : 9895804454
Chosen Option : 1

Q.1
5 Select the antonym of the given word.

OPAQUE

- Ans 1. Turbid
 2. Transparent
 3. Fogged
 4. Murky

Question ID : 9895804453
Chosen Option : 2

Comprehension:

In the following passage some words have been deleted. Fill in the blanks with the help of the alternatives given.

Without water (1) _____ animal can survive. In desert regions the greatest (2) _____ to life is dying of thirst. But many creatures are able to make use of (3) _____ little water that exists in arid areas. One of nature's masterpieces (4) _____ creatures equipped to (5) _____ with desert life is the hardy camel.

SubQuestion No : 16

Q.1
6 Select the most appropriate option that will fill in the blank number 1.

- Ans 1. any
 2. some
 3. every
 4. no

Question ID : 9895804445
Chosen Option : 4

Comprehension:

In the following passage some words have been deleted. Fill in the blanks with the help of the alternatives given.

Without water (1) _____ animal can survive. In desert regions the greatest (2) _____ to life is dying of thirst. But many creatures are able to make use of (3) _____ little water that exists in arid areas. One of nature's masterpieces (4) _____ creatures equipped to (5) _____ with desert life is the hardy camel.

SubQuestion No : 17

Q.1
7 Select the most appropriate option that will fill in the blank number 2.

- Ans 1. threat

- 2. warning
- 3. worry
- 4. requirement

Question ID : 9895804446
Chosen Option : 3

Comprehension:

In the following passage some words have been deleted. Fill in the blanks with the help of the alternatives given.

Without water (1) _____ animal can survive. In desert regions the greatest (2) _____ to life is dying of thirst. But many creatures are able to make use of (3) _____ little water that exists in arid areas. One of nature's masterpieces (4) _____ creatures equipped to (5) _____ with desert life is the hardy camel.

SubQuestion No : 18

Q.1
8 Select the most appropriate option that will fill in the blank number 3.

- Ans
- 1. the
 - 2. that
 - 3. very
 - 4. what

Question ID : 9895804447
Chosen Option : 3

Comprehension:

In the following passage some words have been deleted. Fill in the blanks with the help of the alternatives given.

Without water (1) _____ animal can survive. In desert regions the greatest (2) _____ to life is dying of thirst. But many creatures are able to make use of (3) _____ little water that exists in arid areas. One of nature's masterpieces (4) _____ creatures equipped to (5) _____ with desert life is the hardy camel.

SubQuestion No : 19

Q.1
9 Select the most appropriate option that will fill in the blank number 4.

- Ans
- 1. besides
 - 2. about
 - 3. among
 - 4. between

Question ID : 9895804448
Chosen Option : 3

Comprehension:

In the following passage some words have been deleted. Fill in the blanks with the help of the alternatives given.

Without water (1) _____ animal can survive. In desert regions the greatest (2) _____ to life is dying of thirst. But many creatures are able to make use of (3) _____ little water that exists in arid areas. One of nature's masterpieces (4) _____ creatures equipped to (5) _____ with desert life is the hardy camel.

SubQuestion No : 20

Q.2
0 Select the most appropriate option that will fill in the blank number 5.

- Ans
- 1. cope
 - 2. resist
 - 3. adapt
 - 4. live

Question ID : 9895804449
Chosen Option : 1

Q.2
1 Select the word which means the same as the group of words given.

A place where fights take place

- Ans
- 1. Arsenal
 - 2. Arena
 - 3. Asylum
 - 4. Aquarium

Question ID : 9895804870
Chosen Option : 2

Q.2
2 Select the word which means the same as the group of words given.

A poem that expresses lament for the dead

- Ans
- 1. Lyric
 - 2. Ode
 - 3. Elegy
 - 4. Sonnet

Question ID : 9895804457
Chosen Option : 3

Q.2
3 From the given options, identify the segment in the sentence which contains the grammatical error.

If it weren't for the old man, we haven't had anything to talk about.

- Ans
- 1. we haven't had
 - 2. anything to talk
 - 3. for the old man
 - 4. If it weren't

Question ID : 9895804436
Chosen Option : 1

Q.2
4 Select the synonym of the given word.

SLENDER

- Ans
- 1. Narrow
 - 2. Wide
 - 3. Slim
 - 4. Weak

Question ID : 9895804451
Chosen Option : 1

Q.2
5 Select the correctly spelt word.

- Ans
- 1. Permanant
 - 2. Permanent
 - 3. Pirmenent
 - 4. Perminent

Section : Hindi Language

Q.1 दिए गए वाक्य में रेखांकित खंड को प्रतिस्थापित करने के लिए उपयुक्त विकल्प का चयन करें।

रमेश अपने चालाकी से किसी को आगे नहीं आने दिया।

- Ans
- 1. अपनों चालाकी से
 - 2. अपना चालाकी से
 - 3. आपने चालाकी से
 - 4. अपनी चालाकी से

Q.2 दिए गए शब्द का विलोम चुनें।

स्नेहसिक्त

- Ans
- 1. स्नेहभक्त
 - 2. स्नेहकर्ता
 - 3. स्नेहरिक्त
 - 4. स्नेहकाल

Q.3 दिए गए शब्द के पर्यायवाची शब्द का चयन करें।

चंद्रमा

- Ans
- 1. शशि
 - 2. रवि
 - 3. अनुराग
 - 4. शशिकला

Q.4 दिए गए शब्द का विलोम चुनें।

आवरण

- Ans
- 1. अकरणीय
 - 2. वैयाकरण
 - 3. पर्यावरण
 - 4. अनावरण

Q.5 दिए गए वाक्य में रेखांकित खंड को प्रतिस्थापित करने के लिए उपयुक्त विकल्प का चयन करें।

नेताजी ने बाढ़ पीड़ितों के लिए भोजन का व्यवस्था करवाई।

- Ans
- 1. भोजन के व्यवस्था
 - 2. भोजन की व्यवस्था
 - 3. भोजन को व्यवस्था
 - 4. भोजन पर व्यवस्था

Question ID : 9895803955

Chosen Option : --

Q.6 दिए गए वाक्य का वह भाग ज्ञात करें जिसमें कोई त्रुटि है।

भारतीय संस्कृति की सबसे बड़ी विशेषता रहा है, अनेकता में एकता।

- Ans
- 1. अनेकता में एकता।
 - 2. भारतीय संस्कृति की
 - 3. रहा है
 - 4. सबसे बड़ी विशेषता

Question ID : 9895803953

Chosen Option : --

Q.7 सही वर्तनी वाले शब्द का चयन करें।

- Ans
- 1. वीक्रेता
 - 2. विक्रेता
 - 3. विकरेता
 - 4. वीकरेता

Question ID : 9895803976

Chosen Option : --

Q.8 दिए गए वाक्य का वह भाग ज्ञात करें जिसमें कोई त्रुटि है।

कंप्यूटर के आने से सबसे बड़ा परिवर्तन मिडिया जगत में आई है।

- Ans
- 1. मिडिया जगत में
 - 2. कंप्यूटर के आने से
 - 3. आई है।
 - 4. सबसे बड़ा परिवर्तन

Question ID : 9895803952

Chosen Option : --

Q.9

दिए गए वाक्य का वह भाग ज्ञात करें जिसमें कोई त्रुटि है।

कामकाजी नारी की जीवन चक्की के दो पाटों की तरह होता है।

Ans

1. कामकाजी नारी
2. की तरह होता है।
3. की जीवन
4. चक्की के दो पाटों

Question ID : 9895803951
Chosen Option : --

Q.1 ₀ दिये गये वाक्यांश के लिए एक शब्द चुनिए।

जो कम जानता हो

Ans

1. सर्वज्ञ
2. मर्मज्ञ
3. कर्मज्ञ
4. अल्पज्ञ

Question ID : 9895803974
Chosen Option : --

Q.1 ₁ रिक्त स्थान को भरने के लिए उपयुक्त शब्द का चयन करें। _____ में भीड़ रहती है।

Ans

1. आकाश
2. महानगरों
3. मेज
4. पानी

Question ID : 9895803958
Chosen Option : --

Comprehension:

निम्नलिखित गद्यांश के रिक्त स्थानों की पूर्ति गद्यांश के नीचे दिए गए प्रश्नों के अनुसार कीजिए -

जीवन नदी की _____ (1) के समान है। _____ (2) जीवन है और ठहराव मृत्यु। _____ (3) आगे बढ़ते रहने में ही सुख और आनंद है। आगे बढ़ने में जो तत्व काम करता है वह है _____ (4)। समय के साथ चलनेवाले ही _____ (5) होते हैं।

SubQuestion No : 12

Q.1 ₂ गद्यांश में संकेतित रिक्त स्थान (1) के लिए उपयुक्त शब्द होगा

Ans

1. सीपी
2. धारा
3. रेत

✓ 4. टापू

Question ID : 9895803962
Chosen Option : --

Comprehension:

निम्नलिखित गद्यांश के रिक्त स्थानों की पूर्ति गद्यांश के नीचे दिए गए प्रश्नों के अनुसार कीजिए -

जीवन नदी की _____ (1) के समान है। _____ (2) जीवन है और ठहराव मृत्यु। _____ (3) आगे बढ़ते रहने में ही सुख और आनंद है। आगे बढ़ने में जो तत्व काम करता है वह है _____ (4)। समय के साथ चलनेवाले ही _____ (5) होते हैं।

SubQuestion No : 13

Q.1
3 गद्यांश में संकेतित रिक्त स्थान (2) के लिए उपयुक्त शब्द होगा

- Ans
- 1. ठहरना
 - 2. रुकना
 - 3. दौड़ना
 - 4. बहना

Question ID : 9895803963
Chosen Option : --

Comprehension:

निम्नलिखित गद्यांश के रिक्त स्थानों की पूर्ति गद्यांश के नीचे दिए गए प्रश्नों के अनुसार कीजिए -

जीवन नदी की _____ (1) के समान है। _____ (2) जीवन है और ठहराव मृत्यु। _____ (3) आगे बढ़ते रहने में ही सुख और आनंद है। आगे बढ़ने में जो तत्व काम करता है वह है _____ (4)। समय के साथ चलनेवाले ही _____ (5) होते हैं।

SubQuestion No : 14

Q.1
4 गद्यांश में संकेतित रिक्त स्थान (3) के लिए उपयुक्त शब्द होगा

- Ans
- 1. निरंतर
 - 2. रुक-रुककर
 - 3. थोड़े अन्तराल पर
 - 4. कभी-कभी

Question ID : 9895803964
Chosen Option : --

Comprehension:

निम्नलिखित गद्यांश के रिक्त स्थानों की पूर्ति गद्यांश के नीचे दिए गए प्रश्नों के अनुसार कीजिए -

जीवन नदी की _____ (1) के समान है। _____ (2) जीवन है और ठहराव मृत्यु। _____ (3) आगे बढ़ते रहने में ही सुख और आनंद है। आगे बढ़ने में जो तत्व काम करता है वह है _____ (4)। समय के साथ चलनेवाले ही _____ (5) होते हैं।

SubQuestion No : 15

Q.1
5 गद्यांश में संकेतित रिक्त स्थान (4) के लिए उपयुक्त शब्द होगा

- Ans
- 1. समय
 - 2. परिधान
 - 3. जगह
 - 4. चरित्र

Question ID : 9895803965
Chosen Option : --

Comprehension:

निम्नलिखित गद्यांश के रिक्त स्थानों की पूर्ति गद्यांश के नीचे दिए गए प्रश्नों के अनुसार कीजिए -

जीवन नदी की _____ (1) के समान है। _____ (2) जीवन है और ठहराव मृत्यु। _____ (3) आगे बढ़ते रहने में ही सुख और आनंद है। आगे बढ़ने में जो तत्व काम करता है वह है _____ (4)। समय के साथ चलनेवाले ही _____ (5) होते हैं।

SubQuestion No : 16

Q.1
6 गद्यांश में संकेतित रिक्त स्थान (5) के लिए उपयुक्त शब्द होगा

- Ans
- 1. उत्तीर्ण
 - 2. कामयाब
 - 3. ताकतवर
 - 4. नाकामयाब

Question ID : 9895803966
Chosen Option : --

Q.1
7 रिक्त स्थान को भरने के लिए उपयुक्त शब्द का चयन करें। शरीर में _____ होनी चाहिए।

- Ans
- 1. भाक्ति
 - 2. शक्ति
 - 3. कमजोरी
 - 4. कमी

Question ID : 9895803959
Chosen Option : --

Q.1 निम्नलिखित में से उस विकल्प का चयन करें जो 'कड़वा घूंट पीना' मुहावरे का अर्थ व्यक्त करता है।

- Ans
- 1. कड़वा पानी पीना
 - 2. अपमान करना
 - 3. चुपचाप अपमान सहना
 - 4. किसी को कड़वा पानी पिलाना

Question ID : 9895803971

Chosen Option : --

Q.1 निम्नलिखित में से उस विकल्प का चयन करें जो 'दस से मस न होना' मुहावरे का अर्थ व्यक्त करता है।

- Ans
- 1. कुछ असर न पड़ना
 - 2. बहाना बनाना
 - 3. साफ मना करना
 - 4. घर से बाहर न जाना

Question ID : 9895803972

Chosen Option : --

Q.2 रिक्त स्थान को भरने के लिए उपयुक्त शब्द का चयन करें।

हमेशा सत्य की ही _____ होती है।

- Ans
- 1. तेजी
 - 2. मौत
 - 3. जीत
 - 4. धर्म

Question ID : 9895803960

Chosen Option : --

Q.2 दिए गए वाक्य में रेखांकित खंड को प्रतिस्थापित करने के लिए उपयुक्त विकल्प का चयन करें।

समाज में महान व आदर्श नागरिक बनना ऐसा श्रेष्ठ कार्य है जो धन पर बढ़कर है।

- Ans
- 1. जो धन में बढ़कर है।
 - 2. जो धन को बढ़कर है।
 - 3. जो धन का बढ़कर है।
 - 4. जो धन से बढ़कर है।

Question ID : 9895803954

Chosen Option : --

Q.2 दिये गये वाक्यांश के लिए एक शब्द चुनिए।

जो बिना तिथि बताए आए

- Ans
- 1. दैनिक
 - 2. आगत

✓ 3. अतिथि

✗ 4. संत

Question ID : 9895803973
Chosen Option : --

Q.2
3 दिए गए शब्द के पर्यायवाची शब्द का चयन करें।

विश्व

Ans

1. भूमि

✗ 2. संसार

✗ 3. पाताल

✓ 4. धरती

Question ID : 9895803969
Chosen Option : --

Q.2
4 रिक्त स्थान को भरने के लिए उपयुक्त शब्द का चयन करें।

प्रत्येक कमरे में _____ लगा दो।

Ans

✗ 1. मुर्गे

✗ 2. सब्जी

✗ 3. फल

✓ 4. ताले

Question ID : 9895803957
Chosen Option : --

Q.2
5 सही वर्तनी वाले शब्द का चयन करें।

Ans

✗ 1. अविलंब

✗ 2. अविलंम

✓ 3. अवीलम्ब

✗ 4. अविलम्ब

Question ID : 9895803975
Chosen Option : --

Constable (GD) in CAPFs, NIA, SSF and Rifleman (GD) in Assam Rifles Examination, 2018

Roll No. :	
Registration No.	
Name :	
Exam Venue :	
Exam Time :	12:30 PM - 2:00 PM
Exam Date :	14/02/2019

Section : General Section

Q.1 In a certain code, WORKER is written as OKROKR. How will ASSUME be written in that code?

- Ans 1. SUESUE
 2. SUESVE
 3. SUMSUM
 4. SSESSE

Question ID : 9895802907

Chosen Option : 1

Q.2

Select the option that will correctly replace the question mark (?) in the given pattern.

9	81	?
25	121	289
49	169	361

- Ans 1. 729
 2. 125
 3. 256
 4. 225

Question ID : 9895802918


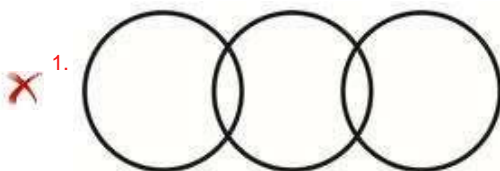
Chosen Option : 4

Q.3


Select the Venn diagram that best represents the given set of classes.

Units, Watt, Volt

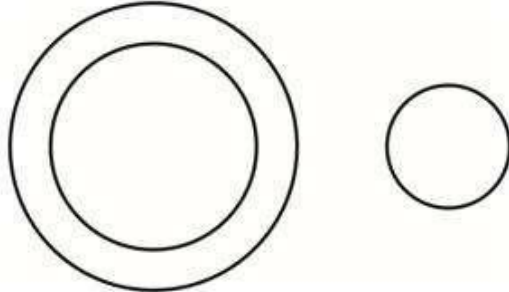
Ans



3.



4.



Question ID : 9895802925
Chosen Option : 2

Q.4 The statements below are followed by two conclusions labeled I and II. Assuming that the information in the statements is true, even if it appears at variance with generally established facts, decide which conclusion(s) logically and definitely follow(s) from the information given in the statements.

Statements:

- 1) Some mice are whales.
- 2) All whales are dogs.

Conclusion:

- I. Some mice are dogs.
- II. No mouse is dog.

Ans 1. Only conclusion I follows.

2. Both conclusions follow.

3. Neither conclusion I nor conclusion II follows.

4. Only conclusion II follows.

Question ID : 9895802913
Chosen Option : 1

Q.5 A square transparent sheet with a pattern is given. How will the pattern appear when the transparent sheet is folded along the dotted line?




Ans 1. Option 1: A square with a star pattern above a horizontal dotted line. The star is partially cut off by the dotted line.

2. Option 2: A square with a star pattern below a horizontal dotted line. The star is partially cut off by the dotted line.

3. Option 3: A square with a star pattern above a horizontal dotted line. The star is partially cut off by the dotted line.

✓ 4.



Question ID : 9895802924
Chosen Option : 4

Q.6 Select the option that will correctly replace the question mark (?) in the series.

9, 20, 42, 75, ?

- Ans
- 1. 99
 - 2. 129
 - 3. 109
 - 4. 119

Question ID : 9895802914
Chosen Option : 2

Q.7 Eight friends A, B, C, D, E, F, G and H are sitting around a circular table facing each other for a lunch. A is opposite F and third to the right of B. G is between F and D. H is to the left of D. E is between C and A. Who is sitting opposite H?

- Ans
- 1. B
 - 2. C
 - 3. D
 - 4. G

Question ID : 9895802910
Chosen Option : 1

Q.8 The statements below are followed by two conclusions labeled I and II. Assuming that the information in the statements is true, even if it appears at variance with generally established facts, decide which conclusion(s) logically and definitely follow(s) from the information given in the statements.

Statements:

- 1) All knights are nuns.
- 2) All nuns are men.

Conclusion:

- I. All men are knights.
- II. All knights are men.

- Ans
- 1. Either conclusion I or conclusion II follows.
 - 2. Both conclusions follow.
 - 3. Only conclusion II follows.
 - 4. Only conclusion I follows.

Question ID : 9895802912
Chosen Option : 3

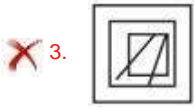
Q.9 Choose the option in which the figure marked 'X' is embedded. (Rotation is not allowed)



X

- Ans
- 1.





Question ID : 9895802922
Chosen Option : 1

Q.1
0 Choose the odd one out of the given options.

- Ans
- ✓ 1. EKO
 - ✗ 2. JIU
 - ✗ 3. KVG
 - ✗ 4. QMJ

Question ID : 9895802902
Chosen Option : 2

Q.1
1 Select the option that is related to the third term in the same way as the second term is related to the first term.

DEH : HIL :: GHL : ?

- Ans
- ✗ 1. KJP
 - ✗ 2. KPL
 - ✓ 3. KLP
 - ✗ 4. KLO

Question ID : 9895802906
Chosen Option : 3

Q.1
2 Choose the option that most closely resembles the mirror image of the given word when mirror is placed at right side.

VOGATION

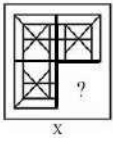
- Ans
- ✗ 1.
 - ✓ 2.
 - ✗ 3.
 - ✗ 4.

Question ID : 9895802923
Chosen Option : 2

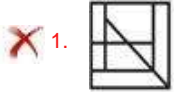
Q.1
3 Choose the odd one out of the given options.

- Ans
- ✗ 1. Colombia
 - ✗ 2. Canada
 - ✓ 3. Asia

Q.1 4 Select a figure from amongst the four alternatives that when placed in the blank space (?) of figure X will complete the pattern. (Rotation is not allowed).



Ans



Q.1 5 In a certain code, CIRCLE is written as 50. How will ALGAE be written in that code?

- Ans
- 1. 57
 - 2. 26
 - 3. 23
 - 4. 59

Q.1 6 Seven friends O, P, Q, R, S, T and U are watching a movie sitting in a row. S is sitting at one extreme end. Q is sitting second to the right of S. P is sitting between O and Q. U is not sitting at any extreme end. R is sitting to the left of T. Who is sitting between P and R?

- Ans
- 1. U
 - 2. R
 - 3. Q
 - 4. O

Q.1 7 Select the option that will correctly replace the question mark (?) in the series.

SNC, QPA, ORY, MTW, ?

- Ans
- 1. KUU
 - 2. KVV
 - 3. KUV
 - 4. KVU

Q.1
8 Select the option that will correctly replace the question mark (?) in the series.

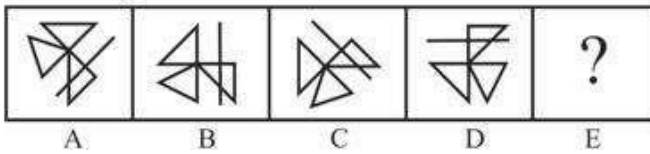
20, 24, 40, 76, ?

- Ans
- 1. 130
 - 2. 120
 - 3. 145
 - 4. 140

Question ID : 9895802915
Chosen Option : 2

Q.1
9 Choose the option that would follow next in the given figure series.

Problem Fig.



- Ans
- 1.
 - 2.
 - 3.
 - 4.

Question ID : 9895802920
Chosen Option : 3

Q.2
0 J, K, L, M, N and O are six teachers. Each one teaches a different subject out of Hindi, English, Math, Science, Social Science and Arts, not necessarily in the same order. Each of them teaches on only one day, from Monday to Saturday, not necessarily in the same order. J teaches Arts on Saturday. L teaches neither English nor Social Science, but he teaches on Thursday. Wednesday is reserved for Maths taught by K. O teaches Science a day before N. Social Science is taught a day before Arts. Which subject is taught on the day between Social Science and Math?

- Ans
- 1. Science
 - 2. Hindi
 - 3. English
 - 4. Arts

Question ID : 9895802911
Chosen Option : 1

Q.2
1 Select the option that is related to the third term in the same way as the second term is related to the first term.

- Ans
- Aeroplane : Hanger :: Gun : ?
- 1. Shoot

- 2. Armoury
- 3. Human
- 4. Fire

Question ID : 9895802904
Chosen Option : 2

Q.2
2 Choose the odd number out of the given options.

- Ans
- 1. 27
 - 2. 625
 - 3. 343
 - 4. 125

Question ID : 9895802917
Chosen Option : 2

Q.2
3 Find out the two signs to be interchanged to make the following equation correct.

$$30 + 28 \times 3 - 16 \div 4 = -50$$

- Ans
- 1. \times and \div
 - 2. $+$ and $-$
 - 3. $-$ and \times
 - 4. $-$ and \div

Question ID : 9895802919
Chosen Option : 2

Q.2
4 Select the option that is related to the third number in the same way as the second number is related to the first number.

$$22 : 242 :: 18 : ?$$

- Ans
- 1. 275
 - 2. 169
 - 3. 162
 - 4. 221

Question ID : 9895802916
Chosen Option : 4

Q.2
5 Select the option that is related to the third term in the same way as the second term is related to the first term.

Chef : Knife :: Surgeon : ?

- Ans
- 1. Scalpel
 - 2. Grip
 - 3. Chisel
 - 4. Spade

Question ID : 9895802905
Chosen Option : 1

Q.2
6 'Do or Die' was the slogan of which famous movement in India?

- Ans
- 1. Quit India Movement
 - 2. Civil Disobedience Movement
 - 3. Non-cooperation Movement
 - 4. Rowlatt Movement

Question ID : 9895804849
Chosen Option : 1

Q.2
7 Which Indian city is the first to make it to the UNESCO World Heritage List?

- Ans
- 1. Bhubaneswar
 - 2. Indore
 - 3. Bengaluru
 - 4. Ahmedabad

Question ID : 9895804845
Chosen Option : 1

Q.2
8 Doddabetta is the highest peak of which of the following mountain ranges?

- Ans
- 1. Vindhya
 - 2. Satpura
 - 3. Aravalli
 - 4. Nilgiri

Question ID : 9895804854
Chosen Option : 3

Q.2
9 Which of the following statements about the National Human Rights Commission is correct?

- Ans
- 1. It consists of 10 members.
 - 2. Its powers are only recommendatory in nature.
 - 3. Mumbai serves as its Headquarters.
 - 4. Its chairman must be a sitting judge in the Supreme Court.

Question ID : 9895804867
Chosen Option : 4

Q.3
0 The King Khalid International Airport serves which country?

- Ans
- 1. Syria
 - 2. Iraq
 - 3. Bahrain
 - 4. Saudi Arabia

Question ID : 9895804852
Chosen Option : 4

Q.3
1 Which of the following is one of the criteria to represent the standard of living in a country?

- Ans
- 1. Industrial growth
 - 2. Poverty ratio
 - 3. National income
 - 4. Per capita income

Question ID : 9895804857
Chosen Option : 4

Q.

2 Rapid integration between countries is known as :

- Ans
- 1. globalisation
 - 2. liberalisation
 - 3. modernisation
 - 4. privatisation

Question ID : 9895804855

Chosen Option : 1

Q.3
3 The term “double fault” is used in:

- Ans
- 1. volleyball
 - 2. tennis
 - 3. snooker
 - 4. kabbadi

Question ID : 9895804848

Chosen Option : 2

Q.3
4 _____ is widely used as a fuel and is a major component of compressed natural gas.

- Ans
- 1. Propane
 - 2. Octane
 - 3. Methane
 - 4. Butane

Question ID : 9895804862

Chosen Option : 3

Q.3
5 Which one of the following products received the first geographical indication (GI) in India?

- Ans
- 1. Mizo Chilli
 - 2. Ratlami Sev
 - 3. Joha Rice
 - 4. Darjeeling Tea

Question ID : 9895804846

Chosen Option : 4

Q.3
6 Where did Babur defeat Ibrahim Lodhi in 1526?

- Ans
- 1. Haldighati
 - 2. Kalinjar
 - 3. Chausa
 - 4. Panipat

Question ID : 9895804850

Chosen Option : 4

Q.3
7 Which temples are well-known for their Nagara-style of architecture having erotic sculptures?

- Ans
- 1. Khajuraho
 - 2. Somnath

- 3. Hampi
- 4. Meenakshi

Question ID : 9895804844
Chosen Option : 1

Q.3
8 The temperate grasslands of South Africa are called:

- Ans
- 1. Downs
 - 2. Praries
 - 3. Pampas
 - 4. Velds

Question ID : 9895804853
Chosen Option : 3

Q.3
9 The prestigious Laureus World Sports Awards was given to the Indian athlete:

- Ans
- 1. Anirban Chatterji
 - 2. Pankaj Advani
 - 3. Dutee Chand
 - 4. Vinesh Phogat

Question ID : 9895804863
Chosen Option : 3

Q.4
0 The term 'mutation' primarily refers to:

- Ans
- 1. genetic migration
 - 2. genetic line
 - 3. genetic correction
 - 4. genetic mistake

Question ID : 9895804861
Chosen Option : 1

Q.4
1 Which of the following countries won the Men's Hockey World Cup 2018?

- Ans
- 1. Belgium
 - 2. New Zealand
 - 3. Argentina
 - 4. Pakistan

Question ID : 9895804847
Chosen Option : 3

Q.4
2 Panchayati Raj institutions came into existence under the:

- Ans
- 1. 42nd and 43rd Amendment Acts
 - 2. 86th and 87th Amendment Acts
 - 3. 63rd and 64th Amendment Acts
 - 4. 73rd and 74th Amendment Acts

Q.4
3 Which IUCN document lists endangered species of flora and fauna?

- Ans
- 1. Blue List
 - 2. Green List
 - 3. Red List
 - 4. Black List

Question ID : 9895804860
Chosen Option : 3

Q.4
4 Who among the following introduced the practice of Sijda (prostration) and Paibos (kissing the feet of monarch) in the court?

- Ans
- 1. Allauddin Khalji
 - 2. Firoz Shah Tughluq
 - 3. Muhammad bin Tughluq
 - 4. Ghiyasuddin Balban

Question ID : 9895804851
Chosen Option : 1

Q.4
5 _____ is a microfinance organisation and community development bank founded in Bangladesh which makes small loans to the impoverished without requiring collateral.

- Ans
- 1. Reserve bank
 - 2. Federal bank
 - 3. Cooperative bank
 - 4. Grameen bank

Question ID : 9895804856
Chosen Option : 4

Q.4
6 Which of the following is NOT a sustainable development goal targeted to be achieved by 2030?

- Ans
- 1. Gender Equality
 - 2. Zero Hunger
 - 3. Good Health and Wellbeing
 - 4. Space Research

Question ID : 9895804864
Chosen Option : 3

Q.4
7 A _____ measures the humidity of the air.

- Ans
- 1. hygrometer
 - 2. micrometer
 - 3. thermometer
 - 4. hydrometer

Question ID : 9895804858
Chosen Option : 1

Q.4 Which household waste has an excellent recycling potential?

Ans 1. Vegetable scraps

2. Metal

3. Plastic

4. Rubber

Question ID : 9895804859

Chosen Option : 1

Q.4
9 World Energy Outlook is released by the:

Ans 1. International Energy Tribunal

2. International Energy Agency

3. World Economic Forum

4. International Energy Organisation

Question ID : 9895804865

Chosen Option : 4

Q.5
0 According to the 2011 census, the total percentage of Muslims in India is :

Ans 1. 10.2

2. 12.4

3. 16.6

4. 14.2

Question ID : 9895804866

Chosen Option : 2

Q.5
1 A sum of ₹ 11700 becomes ₹ 16848 in 2 years at the rate of compound interest. If the interest is compounded annually, then what will be the rate of interest?

Ans 1. 20%

2. 15%

3. 17.5%

4. 25%

Question ID : 9895804781

Chosen Option : 1

Q.5
2 A sum of ₹ 4650 is lent at simple interest. If the rate of interest is 7.5% per annum, then what will be the simple interest for 4 years?

Ans 1. ₹ 1395

2. ₹ 1295

3. ₹ 1495

4. ₹ 1300

Question ID : 9895804780

Chosen Option : 1

Q.5
3 Pipe C can fill a tank in 12 hours and pipe D can fill the same tank in 40 hours. In how many hours both pipe C and D together can fill the same tank?

Ans 1. $\frac{60}{7}$ hours

2. $\frac{60}{11}$ hours

3. $\frac{120}{13}$ hours

4. $\frac{120}{11}$ hours

Question ID : 9895804782
Chosen Option : 3

Q.5
4 The length, breadth and height of a solid cuboid is 14 cm, 12 cm and 8 cm respectively. If cuboid is melted to form identical cubes of side 2 cm, then what will be the number of identical cubes?

- Ans
- 1. 168
 - 2. 144
 - 3. 156
 - 4. 128

Question ID : 9895804788
Chosen Option : 3

Q.5
5 The average weight of all the vehicles in a parking is 4000 kg. The average weight of 12 vehicles is 6000 kg. Average weight of the remaining vehicles is 3000 kg. What is the total number of vehicles in the parking?

- Ans
- 1. 40
 - 2. 36
 - 3. 20
 - 4. 30

Question ID : 9895804771
Chosen Option : 2

Q.5
6 What is the value of $80 \div 40 - 10 - 5 \times 4$ of $\left(\frac{1}{3} \div \frac{10}{3}\right)$?

- Ans
- 1. -12
 - 2. $\frac{40}{3}$
 - 3. $\frac{22}{5}$
 - 4. -10

Question ID : 9895804768
Chosen Option : 4

Q.5
7 The total weight of 12 boys and 8 girls is 1080 kg. If the average weight of boys is 50 kg, then what will be average weight of girls?

- Ans
- 1. 55 kg
 - 2. 50 kg
 - 3. 60 kg
 - 4. 45 kg

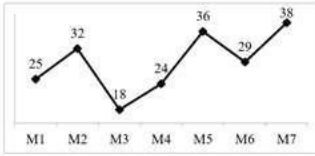
Question ID : 9895804770
Chosen Option : 3

Q.5
8 The diagonal of a square is 14 cm. What will be the length of the diagonal of the square whose area is double of the area of first square?

- Ans
- 1. $28\sqrt{2}$ cm
 - 2. $14\sqrt{2}$ cm
 - 3. 28 cm
 - 4. $21\sqrt{2}$ cm

Question ID : 9895804787

Q.5
9 The line chart given below shows the production (in 10000s) of cars in 7 different months.



Production of cars in month M4 is what percent of the production of cars in month M2?

- Ans
- 1. 125%
 - 2. 75%
 - 3. 66.66%
 - 4. 83.33%

Question ID : 9895804791

Chosen Option : 3

Q.6
0 What is the value of $\left[88 - 44 \div (22 \times 4) \text{ of } \left(\frac{1}{2} - \frac{1}{4} \div \frac{1}{8}\right)\right]$?

- Ans
- 1. $\frac{265}{3}$
 - 2. $\frac{703}{9}$
 - 3. $\frac{514}{9}$
 - 4. $\frac{711}{3}$

Question ID : 9895804769

Chosen Option : 1

Q.6
1 The Least Common Multiple and Highest Common Factor of two numbers are 60 and 3 respectively. If their difference is 3, then what will be the sum of these two numbers?

- Ans
- 1. 24
 - 2. 35
 - 3. 27
 - 4. 21

Question ID : 9895804767

Chosen Option : 3

Q.6
2 Selling price and cost price of an article are in the ratio of 7 : 5. What will be the profit/loss percentage?

- Ans
- 1. 40% profit
 - 2. 28.5% profit
 - 3. 20% loss
 - 4. 14.28% loss

Question ID : 9895804776

Chosen Option : 1

Q.6
3 The length of a rectangle is 16 cm. If the length of diagonal is 20 cm, then what will be the breadth of the rectangle?

- Ans
- 1. 8 cm
 - 2. 12 cm
 - 3. 10 cm

 4.

Question ID : 9895804786
Chosen Option : 2

Q.6
4

Ans  1.
 2.
 3.
 4.

Question ID : 9895804790
Chosen Option : 2

Q.6
5

Ans  1.
 2.
 3.
 4.

Question ID : 9895804784
Chosen Option : 3

Q.6
6

Ans  1.
 2.
 3.
 4.

Question ID : 9895804783
Chosen Option : 3

Q.6
7

Ans  1.
 2.
 3.
 4.

Q.6 8 Four numbers are in the ratio of 2 : 5 : 3 : 8 respectively. If the sum of these four numbers is 432, then what is the sum of first and fourth number?

- Ans
- 1. 192
 - 2. 216
 - 3. 240
 - 4. 232

Question ID : 9895804777
Chosen Option : 3

Q.6 9 The length of platform is double of the length of train. Speed of the train is 144 km/hr. If train crosses the platform in 30 seconds, then what is the length of the platform?

- Ans
- 1. 600 metres
 - 2. 800 metres
 - 3. 500 metres
 - 4. 400 metres

Question ID : 9895804785
Chosen Option : 2

Q.7 0 The ratio of number of children, women and men in a colony is 6 : 4 : 3 respectively and the colony has at least 200 members. What will be minimum number of children in the colony?

- Ans
- 1. 48
 - 2. 72
 - 3. 64
 - 4. 96

Question ID : 9895804778
Chosen Option : 4

Q.7 1 The marked price of an article is ₹ 1200 and discount offered is 31%. If profit is 15%, then what will be the cost price?

- Ans
- 1. ₹ 640
 - 2. ₹ 704
 - 3. ₹ 748
 - 4. ₹ 720

Question ID : 9895804772
Chosen Option : 2

Q.7 2 If the length of a rectangle increases by 50% and the breadth decreases by 25%, then what will be the percent increase in its area?

- Ans
- 1. 15%
 - 2. 17.5%
 - 3. 12.5%
 - 4. 25%

Question ID : 9895804774
Chosen Option : 3

Q.7 3 Selling price of first article is ₹ 470 and cost price of second article is ₹ 470. If there is a loss of 20% on first article and profit of 20% on second article, then what will be the overall profit or loss percentage?

- Ans
- 1. 2.22% loss
 - 2. 2.22% loss
 - 3. 4 % profit

- 3. No profit no loss
- 4. 1.80% loss

Question ID : 9895804775
Chosen Option : 1

Q.7
4 Teena, Reena and Sheena start a business with investment of respectively ₹ 24000, ₹ 28000 and ₹ 20000. Teena invests for 8 months, Reena invests for 10 months and Sheena invests for one year. If the total profit at the end of year is ₹ 25810, then what is the share of Teena?

- Ans
- 1. ₹ 6960
 - 2. ₹ 10150
 - 3. ₹ 7940
 - 4. ₹ 8700

Question ID : 9895804779
Chosen Option : 4

Q.7
5 What is the median of the given data?

1, 3, 6, 2, 5, 8, 3, 8, 2

- Ans
- 1. 3
 - 2. 5
 - 3. 2
 - 4. 2.5

Question ID : 9895804773
Chosen Option : 1

Section : English Language

Q.1 Select the most appropriate option to fill in the blank.

Gita won't pass the examination and _____ will Rita.

- Ans
- 1. nor
 - 2. or
 - 3. either
 - 4. neither

Question ID : 9895804469
Chosen Option : 4

Q.2 Select the most appropriate option to substitute the underlined segment in the given sentence. If there is no need to substitute it, select No Improvement.

Tourists visiting Leh take home photos and memories but leave back a mountain of waste.

- Ans
- 1. leave away
 - 2. left back
 - 3. No improvement
 - 4. leave behind

Question ID : 9895804465
Chosen Option : 4

Comprehension:

In the following passage some words have been deleted. Fill in the blanks with the help of the alternatives given.

The Second Anglo-Maratha War had shattered the (1) _____ of the Maratha chiefs, but not their spirit. The loss of their freedom caused them deep _____ (2). They made a last (3) _____ attempt to regain their independence in 1817. The lead in organising a united front of the Maratha chiefs _____ (4) by the Peshwa who was smarting under the (5) _____ control exercised by the British Resident.

SubQuestion No : 3

Q.3 Select the most appropriate option that will fill in the blank number 1.

- Ans
- 1. patience
 - 2. dignity
 - 3. power
 - 4. time

Question ID : 9895804471
Chosen Option : 2

Comprehension:

In the following passage some words have been deleted. Fill in the blanks with the help of the alternatives given.

The Second Anglo-Maratha War had shattered the (1) _____ of the Maratha chiefs, but not their spirit. The loss of their freedom caused them deep _____ (2). They made a last (3) _____ attempt to regain their independence in 1817. The lead in organising a united front of the Maratha chiefs _____ (4) by the Peshwa who was smarting under the (5) _____ control exercised by the British Resident.

SubQuestion No : 4

Q.4 Select the most appropriate option that will fill in the blank number 2.

- Ans
- 1. agony
 - 2. distress
 - 3. fear
 - 4. depression

Question ID : 9895804472
Chosen Option : 1

Comprehension:

In the following passage some words have been deleted. Fill in the blanks with the help of the alternatives given.

The Second Anglo-Maratha War had shattered the (1) _____ of the Maratha chiefs, but not their spirit. The loss of their freedom caused them deep _____ (2). They made a last (3) _____ attempt to regain their independence in 1817. The lead in organising a united front of the Maratha chiefs _____ (4) by the Peshwa who was smarting under the (5) _____ control exercised by the British Resident.

SubQuestion No : 5

Q.5 Select the most appropriate option that will fill in the blank number 3.

- Ans
- 1. violent
 - 2. massive
 - 3. desperate
 - 4. feeble

Question ID : 9895804473
Chosen Option : 2

Comprehension:

In the following passage some words have been deleted. Fill in the blanks with the help of the alternatives given.

The Second Anglo-Maratha War had shattered the (1) _____ of the Maratha chiefs, but not their spirit. The loss of their freedom caused them deep _____ (2). They made a last (3) _____ attempt to regain their independence in 1817. The lead in organising a united front of the Maratha chiefs _____ (4) by the Peshwa who was smarting under the (5) _____ control exercised by the British Resident.

SubQuestion No : 6

Q.6 Select the most appropriate option that will fill in the blank number 4.

- Ans
- 1. was taking
 - 2. was taken
 - 3. had taken
 - 4. were taken

Question ID : 9895804474
Chosen Option : 1

Comprehension:

In the following passage some words have been deleted. Fill in the blanks with the help of the alternatives given.

The Second Anglo-Maratha War had shattered the (1) _____ of the Maratha chiefs, but not their spirit. The loss of their freedom caused them deep _____ (2). They made a last (3) _____ attempt to regain their independence in 1817. The lead in organising a united front of the Maratha chiefs _____ (4) by the Peshwa who was smarting under the (5) _____ control exercised by the British Resident.

SubQuestion No : 7

Q.7 Select the most appropriate option that will fill in the blank number 5.

- Ans
- 1. cruel
 - 2. orthodox
 - 3. pleasant
 - 4. rigid

Question ID : 9895804475
Chosen Option : 2

Q.8 Select the synonym of the given word.

AGILE

- Ans
- 1. Aggressive
 - 2. Active
 - 3. Dull
 - 4. Lazy

Question ID : 9895804476
Chosen Option : 2

Q.9 Select the correctly spelt word.

- Ans
- 1. Gratefull
 - 2. Greatfull
 - 3. Greatful
 - 4. Grateful

Question ID : 9895804485
Chosen Option : 2

Q.10 Select the antonym of the given word.

HIDEOUS

- Ans
- 1. Beautiful
 - 2. Secretive
 - 3. Detestable
 - 4. Ugly

Question ID : 9895804478

Chosen Option : 3

Q.1
1 Select the antonym of the given word.

BLESS

- Ans
- 1. Purify
 - 2. Sanctify
 - 3. Wish
 - 4. Curse

Question ID : 9895804479
Chosen Option : 2

Q.1
2 From the given options, identify the segment in the sentence which contains the grammatical error.

Ram always tries to do things very carefully and made sure he does them correctly.

- Ans
- 1. to do things
 - 2. Ram always tries
 - 3. does them
 - 4. and made sure

Question ID : 9895804463
Chosen Option : 4

Q.1
3 From the given options, identify the segment in the sentence which contains the grammatical error.

If they had a playground here, they can play after their school is over.

- Ans
- 1. after their
 - 2. If they had
 - 3. school is over
 - 4. they can play

Question ID : 9895804464
Chosen Option : 3

Q.1
4 Select the correctly spelt word.

- Ans
- 1. Occation
 - 2. Occassion
 - 3. Occasion
 - 4. Ocassion

Question ID : 9895804484
Chosen Option : 2

Q.1
5 Select the option that means the same as the given idiom.

A red letter day

- Ans
- 1. A sad day
 - 2. A boring day
 - 3. A memorable day
 - 4. A painful day

Q ID : 9895804480

Chosen Option : 3

Q.1
6 Select the word which means the same as the group of words given.

Someone who leaves one's country to settle in another country.

- Ans
- 1. Tourist
 - 2. Emigrant
 - 3. Foreigner
 - 4. Explorer

Question ID : 9895804871
Chosen Option : 2

Q.1
7 Select the most appropriate word to fill in the blank.

Just are the _____ of God.

- Ans
- 1. ways
 - 2. deeds
 - 3. plans
 - 4. tricks

Question ID : 9895804486
Chosen Option : 1

Q.1
8 Select the synonym of the given word.

MELODIOUS

- Ans
- 1. Rhythmic
 - 2. Rattling
 - 3. Tuneful
 - 4. Doleful

Question ID : 9895804477
Chosen Option : 4

Q.1
9 Select the option that means the same as the given idiom.

To eat humble pie

- Ans
- 1. To deny desperately
 - 2. To defend oneself
 - 3. To accept error
 - 4. To be aggressive

Question ID : 9895804481
Chosen Option : 4

Q.2
0 From the given options, identify the segment in the sentence which contains the grammatical error.

I said you to prepare the article yesterday but you didn't.

- Ans
- 1. the article
 - 2. I said you
 - 3. you didn't
 - 4. the article

4. to prepare

Question ID : 9895804462
Chosen Option : 3

Q.2
1 Select the most appropriate option to fill in the blank.

You can visit me on _____ at 7 o'clock.

- Ans
- 1. tomorrow
 - 2. next month
 - 3. today
 - 4. Sunday

Question ID : 9895804468
Chosen Option : 1

Q.2
2 Select the most appropriate option to substitute the underlined segment in the given sentence. If there is no need to substitute it, select No Improvement.

Yesterday eleven coaches of a train headed for Delhi was derailed at Vaishali district of Bihar.

- Ans
- 1. was derailed in
 - 2. were derailed in
 - 3. No improvement
 - 4. were derail at

Question ID : 9895804467
Chosen Option : 2

Q.2
3 Select the most appropriate word to fill in the blank.

_____ are to be avoided; they lead to conflict.

- Ans
- 1. Questions
 - 2. Statements
 - 3. Arguments
 - 4. Decisions

Question ID : 9895804487
Chosen Option : 3

Q.2
4 Select the most appropriate option to substitute the underlined segment in the given sentence. If there is no need to substitute it, select No Improvement.

On inspection a hundred year old bridge was find being too weak to take the load of lakhs of vehicles everyday.

- Ans
- 1. was being found
 - 2. No improvement
 - 3. was found to be
 - 4. has to be found

Question ID : 9895804466
Chosen Option : 3

Q.2
5 Select the word which means the same as the group of words given.

Ans One who is present everywhere

- Omnipotent
- Omniscient
- Omnipresent
- Omnivorous

Section : Hindi Language

Q.1 निम्नलिखित में से उस विकल्प का चयन करें जो 'ढोल पीटना' मुहावरे का अर्थ व्यक्त करता है।

- Ans
- 1. ढोल पीटकर बताना
 - 2. गाने के साथ ढोल बजाना
 - 3. बात को प्रचारित करना
 - 4. ढोल को पीटना

Question ID : 9895804023
Chosen Option : --

Q.2 सही वर्तनी वाले शब्द का चयन करें।

- Ans
- 1. खूबसूरति
 - 2. खुबसुरती
 - 3. खूबसुरती
 - 4. खूबसूरती

Question ID : 9895804027
Chosen Option : --

Q.3 रिक्त स्थान को भरने के लिए उपयुक्त शब्द का चयन करें।

आपकी यात्रा _____ हो।

- Ans
- 1. अशुभ
 - 2. जंगलमय
 - 3. हँसमुख
 - 4. मंगलमय

Question ID : 9895804011
Chosen Option : --

Q.4 दिए गए शब्द के पर्यायवाची शब्द का चयन करें।

- जंगल
- Ans
- 1. पत्थर
 - 2. पय
 - 3. उपवन

Comprehension:

निम्नलिखित गद्यांश के रिक्त स्थानों की पूर्ति गद्यांश के नीचे दिए गए प्रश्नों के अनुसार कीजिए -

संसार के महान व्यक्ति अथक _____(1) करके ही उन्नति के _____(2) पर पहुंचे हैं। उन्होंने छोटे से छोटा समझे जानेवाले कार्य को पूरी _____(3) से किया। बोझा ढोनेवाले कुली तेनजिंग ने एवरेस्ट पर _____(4) की पताका फहरा दिया। संस्कृत में एक _____(5) है - उद्यम से ही कार्य सिद्ध होते हैं, सिर्फ इच्छा करने से नहीं।

SubQuestion No : 5

Q.5 गद्यांश में संकेतित रिक्त स्थान (1) के लिए उपयुक्त शब्द होगा

- Ans
- 1. पढ़ाई
 - 2. परिश्रम
 - 3. सेवा
 - 4. घुमक्कड़ी

Comprehension:

निम्नलिखित गद्यांश के रिक्त स्थानों की पूर्ति गद्यांश के नीचे दिए गए प्रश्नों के अनुसार कीजिए -

संसार के महान व्यक्ति अथक _____(1) करके ही उन्नति के _____(2) पर पहुंचे हैं। उन्होंने छोटे से छोटा समझे जानेवाले कार्य को पूरी _____(3) से किया। बोझा ढोनेवाले कुली तेनजिंग ने एवरेस्ट पर _____(4) की पताका फहरा दिया। संस्कृत में एक _____(5) है - उद्यम से ही कार्य सिद्ध होते हैं, सिर्फ इच्छा करने से नहीं।

SubQuestion No : 6

Q.6 गद्यांश में संकेतित रिक्त स्थान (2) के लिए उपयुक्त शब्द होगा

- Ans
- 1. तल
 - 2. शिखर
 - 3. गर्त
 - 4. सिंधु

Comprehension:

निम्नलिखित गद्यांश के रिक्त स्थानों की पूर्ति गद्यांश के नीचे दिए गए प्रश्नों के अनुसार कीजिए -

संसार के महान व्यक्ति अथक _____(1) करके ही उन्नति के _____(2) पर पहुंचे हैं। उन्होंने छोटे से छोटा समझे जानेवाले कार्य को पूरी _____(3) से किया। बोझा ढोनेवाले कुली तेनजिंग ने एवरेस्ट पर _____(4) की पताका फहरा दिया। संस्कृत में एक _____(5) है - उद्यम से ही कार्य सिद्ध होते हैं, सिर्फ इच्छा करने से नहीं।

SubQuestion No : 7

Q.7 गद्यांश में संकेतित रिक्त स्थान (3) के लिए उपयुक्त शब्द होगा

- Ans
- 1. निष्क्रियता
 - 2. उपेक्षा
 - 3. बेमन
 - 4. लगन

Question ID : 9895804015

Chosen Option : --

Comprehension:

निम्नलिखित गद्यांश के रिक्त स्थानों की पूर्ति गद्यांश के नीचे दिए गए प्रश्नों के अनुसार कीजिए -

संसार के महान व्यक्ति अथक _____(1) करके ही उन्नति के _____(2) पर पहुंचे हैं। उन्होंने छोटे से छोटा समझे जानेवाले कार्य को पूरी _____(3) से किया। बोझा ढोनेवाले कुली तेनजिंग ने एवरेस्ट पर _____(4) की पताका फहरा दिया। संस्कृत में एक _____(5) है - उद्यम से ही कार्य सिद्ध होते हैं, सिर्फ इच्छा करने से नहीं।

SubQuestion No : 8

Q.8 गद्यांश में संकेतित रिक्त स्थान (4) के लिए उपयुक्त शब्द होगा

- Ans
- 1. विजय
 - 2. मानव
 - 3. दर्प
 - 4. धर्म

Question ID : 9895804016

Chosen Option : --

Comprehension:

निम्नलिखित गद्यांश के रिक्त स्थानों की पूर्ति गद्यांश के नीचे दिए गए प्रश्नों के अनुसार कीजिए -

संसार के महान व्यक्ति अथक _____(1) करके ही उन्नति के _____(2) पर पहुंचे हैं। उन्होंने छोटे से छोटा समझे जानेवाले कार्य को पूरी _____(3) से किया। बोझा ढोनेवाले कुली तेनजिंग ने एवरेस्ट पर _____(4) की पताका फहरा दिया। संस्कृत में एक _____(5) है - उद्यम से ही कार्य सिद्ध होते हैं, सिर्फ इच्छा करने से नहीं।

SubQuestion No : 9

Q.9 गद्यांश में संकेतित रिक्त स्थान (5) के लिए उपयुक्त शब्द होगा

- Ans
- 1. उक्ति
 - 2. युक्ति
 - 3. बात
 - 4. भुक्ति

Question ID : 9895804017
Chosen Option : --

Q.1
0 दिए गए शब्द का विलोम चुनें।

ह्रस्व

- Ans
- 1. दीर्घ
 - 2. रोना
 - 3. अहिंसा
 - 4. लघु

Question ID : 9895804018
Chosen Option : --

Q.1
1 सही वर्तनी वाले शब्द का चयन करें।

- Ans
- 1. ललिमा
 - 2. ललईमा
 - 3. लालीमा
 - 4. लालिमा

Question ID : 9895804026
Chosen Option : --

Q.1
2 रिक्त स्थान को भरने के लिए उपयुक्त शब्द का चयन करें।

गंगा के जल को _____ माना जाता है।

- Ans
- 1. जहर

- 2. विष
- 3. पवित्र
- 4. शुद्ध

Question ID : 9895804008

Chosen Option : --

Q.1
3 दिए गए वाक्य में रेखांकित खंड को प्रतिस्थापित करने के लिए उपयुक्त विकल्प का चयन करें।

खेल कूद हमें विपरीत परिस्थितियों में आगे बढ़ने से प्रेरणा देते हैं।

- Ans
- 1. आगे बढ़ना की
 - 2. आगे बढ़ते का
 - 3. आगे बढ़ने की
 - 4. आगे बढ़ने के

Question ID : 9895804005

Chosen Option : --

Q.1
4 दिए गए शब्द का विलोम चुनें।

स्थावर

- Ans
- 1. संगम
 - 2. जंगल
 - 3. जगम
 - 4. नग्न

Question ID : 9895804019

Chosen Option : --

Q.1
5 दिए गए शब्द के पर्यायवाची शब्द का चयन करें।

पथ

- Ans
- 1. भानु
 - 2. पंछी
 - 3. पथिक
 - 4. राह

Question ID : 9895804020

Chosen Option : --

Q.1
6 दिये गये वाक्यांश के लिए एक शब्द चुनिए।

जो बात पहले कभी न हुई हो

- Ans
- 1. सुलभ
 - 2. अभूतपूर्व

✗ 3. अविश्वसनीय

✗ 4. दुर्लभ

Question ID : 9895804024

Chosen Option : --

Q.1
7 रिक्त स्थान को भरने के लिए उपयुक्त शब्द का चयन करें।

आग _____ रूप धारण कर चुकी थी।

Ans

✗ 1. हँसमुख

✗ 2. नफरत

✓ 3. प्रेम

✗ 4. भीषण

Question ID : 9895804010

Chosen Option : --

Q.1
8 दिए गए वाक्य का वह भाग ज्ञात करें जिसमें कोई त्रुटि है।

इस साल गर्मी के मौसम में आर्कटिक क्षेत्र में बर्फ सबसे कम पाई गया।

Ans

✓ 1. इस साल

✗ 2. गर्मी के मौसम में

✗ 3. आर्कटिक क्षेत्र में

✗ 4. बर्फ सबसे कम पाई गया।

Question ID : 9895804002

Chosen Option : --

Q.1
9 दिए गए वाक्य में रेखांकित खंड को प्रतिस्थापित करने के लिए उपयुक्त विकल्प का चयन करें।

कक्षा में चालीस छात्र हैं, लेकिन कार्तिक सबसे बुद्धिमान है।

Ans

✗ 1. कार्तिक सबको बुद्धिमान है।

✗ 2. कार्तिक सबसे बुद्धिमान है।

✓ 3. कार्तिक सबका बुद्धिमान है।

✗ 4. कार्तिक सब पर बुद्धिमान है।

Question ID : 9895804007

Chosen Option : --

Q.2
0

रिक्त स्थान को भरने के लिए उपयुक्त शब्द का चयन करें।

अध्यापक के कक्षा _____ ही सभी बच्चे शरारतें करने लगे।

Ans

- 1. से आते
- 2. से जाते
- 3. को आते
- 4. को जाते

Question ID : 9895804009
Chosen Option : --

Q.2
1 दिए गए वाक्य का वह भाग ज्ञात करें जिसमें कोई त्रुटि है।

समाचार पत्रों का उद्देश्य होनी चाहिए समाचारों को सकारात्मक दिशा देना।

Ans

- 1. समाचार पत्रों का उद्देश्य
- 2. सकारात्मक दिशा देना।
- 3. होनी चाहिए
- 4. समाचारों को

Question ID : 9895804004
Chosen Option : --

Q.2
2 दिये गये वाक्यांश के लिए एक शब्द चुनिए।

जिसमें शक्ति न हो

Ans

- 1. सशक्ति
- 2. अशक्त
- 3. शक्तिशाली
- 4. सशक्त

Question ID : 9895804025
Chosen Option : --

Q.2
3 निम्नलिखित में से उस विकल्प का चयन करें जो 'डींग मारना'

मुहावरे का अर्थ व्यक्त करता है।

Ans

- 1. बहुत बातें करना
- 2. बड़ चढ़कर बातें करना
- 3. कम बातें करना
- 4. मिल-जुल कर बात करना

Question ID : 9895804022

Q.2
4 दिए गए वाक्य का वह भाग ज्ञात करें जिसमें कोई त्रुटि है।

आप 'आधे-अधूरे' नामक नाटक को देखने के लिए तुम्हारे मित्र को बुलाइये।

- Ans **X**
1. नाटक को देखने के लिए
 2. को बुलाइये।
 3. आप 'आधे-अधूरे' नामक
 4. तुम्हारे मित्र

Question ID : 9895804003

Chosen Option : --

Q.2
5 दिए गए वाक्य में रेखांकित खंड को प्रतिस्थापित करने के लिए उपयुक्त विकल्प का चयन करें।

जातिवाद की समस्या स्वस्थ राष्ट्रीय के पनपने में बहुत बड़ा बाधक तत्व है।

- Ans
1. स्वस्थता राष्ट्र के पनपने में
 2. स्वास्थ्य राष्ट्रीय के पनपने में
 3. स्वास्थ्य राष्ट्रीयता के पनपने में
 4. स्वस्थ राष्ट्रीयता के पनपने में

Question ID : 9895804006

Chosen Option : --

Constable (GD) in CAPFs, NIA, SSF and Rifleman (GD) in Assam Rifles Examination, 2018

Roll No. :	
Registration No.	
Name :	
Exam Venue :	ION Digital Zone iDZ Bannerghatta Main Road
Exam Time :	4:00 PM - 5:30 PM
Exam Date :	14/02/2019

Section : General Section

Q.1 In a certain code, DIG is written as 60. How will FEED be written in that code?

- Ans
- 1. 90
 - 2. 80
 - 3. 20
 - 4. 50

Question ID : 9895803371
Chosen Option : 2

Q.2

Eight friends A, B, C, D, E, F, G and H are sitting around a circular table facing each other for a lunch. A is opposite F and third to the right of B. G is between F and D. H is to the left of D. E is between C and A. Who is sitting third to the right of H?

- Ans
- 1. D
 - 2. A
 - 3. B
 - 4. F

Question ID : 9895803373
Chosen Option : 2

Q.3

A square transparent sheet with a pattern is given. How will the pattern appear when the transparent sheet is folded along the dotted line?



Ans

- 1.
- 2.
- 3.
- 4.

Question ID : 9895803387

Q.4 The statements below are followed by two conclusions labeled I and II. Assuming that the information in the statements is true, even if it appears at variance with generally established facts, decide which conclusion(s) logically and definitely follow(s) from the information given in the statements.

Statements:

- 1.) All pens are frogs.
- 2.) All crows are frogs.

Conclusions:

- I. No pen is a crow.
- II. Some pens are crows.

- Ans**
1. Only conclusion II follows.
 2. Both conclusions follow.
 3. Only conclusion I follows.
 4. Either conclusion I or conclusion II follows.

Question ID : 9895803375
Chosen Option : 3

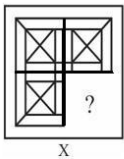
Q.5 Select the option that is related to the third term in the same way as the second term is related to the first term.

BFH : HBF :: GKM : ?

- Ans**
1. KMG
 2. MKI
 3. MGK
 4. IKM

Question ID : 9895803369
Chosen Option : 3

Q.6 Select a figure from amongst the four alternatives that when placed in the blank space (?) of figure X will complete the pattern. (Rotation is not allowed).



X

- Ans**
- 1.
 - 2.
 - 3.
 - 4.

Q.7 Choose the odd number out of the given options.

- Ans
- 1. 216
 - 2. 65
 - 3. 8
 - 4. 125

Q.8 Choose the option in which the figure marked 'X' is embedded. (Rotation is not allowed)



- Ans
- 1.
 - 2.
 - 3.
 - 4.

Q.9 Seven friends O, P, Q, R, S, T and U are watching a movie sitting in a row. S is sitting at one extreme end. Q is sitting second to the right of S. P is sitting between O and Q. U is NOT sitting at any extreme end. R is sitting to the left of T. Who is sitting fourth to the right of U?

- Ans
- 1. R
 - 2. Q
 - 3. T
 - 4. P

Q.1 Choose the option that most closely resembles the mirror image of the given word when mirror is placed at right side.

MORTIFY

- Ans
- 1.
 - 2.

3. MORTIFY

4. MORTIFY

Question ID : 9895803386
Chosen Option : 4

Q.1 Select the option that is related to the third term in the same way as the second term is related to the first term.

1

Dispur : Assam :: Kohima : ?

Ans 1. Capital

2. Sikkim

3. Meghalaya

4. Nagaland

Question ID : 9895803367
Chosen Option : 4

Q.1 Select the option that will correctly replace the question mark (?) in the series.

2

6, 21, 51, 96, ?

Ans 1. 156

2. 176

3. 136

4. 116

Question ID : 9895803377
Chosen Option : 1

Q.1 Choose the odd one out of the given options.

3

Ans 1. LNM

2. RNK

3. JKV

4. HLW

Question ID : 9895803365
Chosen Option : 3

Q.1 Find out the two signs to be interchanged to make the following equation correct.

4

$27 + 48 \times 2 - 7 \div 3 = 30$

Ans 1. - and \div

2. + and -

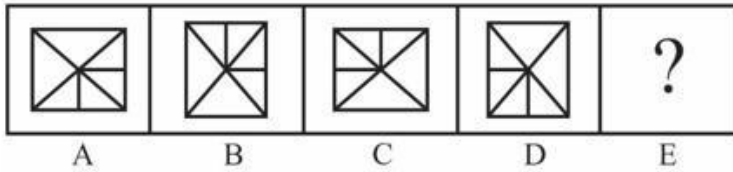
3. \times and \div

4. - and \times

Question ID : 9895803382
Chosen Option : 3

Q.1

5 Choose the option that would follow next in the given figure series.



Ans

- 1.
- 2.
- 3.
- 4.

Question ID : 9895803383
Chosen Option : 2

Q.1 Select the option that will correctly replace the question mark (?) in the series.

6

TOD, RQB, PSZ, NUX, ?

- Ans
- 1. LWU
 - 2. LVW
 - 3. LWW
 - 4. LWV

Question ID : 9895803364
Chosen Option : 2

Q.1 Select the option that is related to the third number in the same way as the second number is related to the first number.

7

45 : 315 :: 37 : ?

- Ans
- 1. 144
 - 2. 259
 - 3. 169
 - 4. 221

Question ID : 9895803379
Chosen Option : 4

Q.1 In a certain code, STEERING is written as TEIGTEIG. How will QUESTION be written in that code?

8

- Ans
- 1. USINVSIN

- 2. USJNUSIN
- 3. USINUSIN
- 4. USINUSJN

Question ID : 9895803370
Chosen Option : 1

Q.1 The statements below are followed by two conclusions labeled I and II. Assuming that the information in the statements is true, even if it appears at variance with generally established facts, decide which conclusion(s) logically and definitely follow(s) from the information given in the statements.

Statements:

- 1.) Some owls are horses.
- 2.) Some horses are hares.

Conclusions:

- I. Some owls are hares.
- II. Some hares are owls.

- Ans**
- 1. Only conclusion II follows.
 - 2. Only conclusion I follows.
 - 3. Both conclusions follow.
 - 4. Neither conclusion I nor conclusion II follows.

Question ID : 9895803376
Chosen Option : 2

Q.2 Choose the odd one out of the given options.

- Ans**
- 1. Ghana
 - 2. Cuba
 - 3. Egypt
 - 4. Berlin

Question ID : 9895803366
Chosen Option : 4

Q.2 Select the option that will correctly replace the question mark (?) in the series.

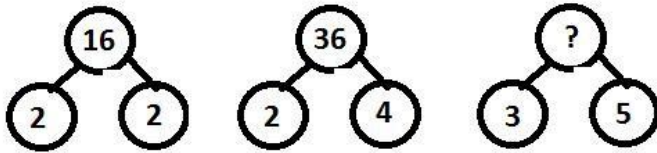
5, 6, 14, 41, ?

- Ans**
- 1. 135
 - 2. 105
 - 3. 115
 - 4. 95

Question ID : 9895803378
Chosen Option : 4

Q.2
2

Select the option that will correctly replace the question mark (?) in the given pattern.



- Ans
- 1. 34
 - 2. 15
 - 3. 64
 - 4. 8

Question ID : 9895803381
Chosen Option : 1

Q.2 J, K, L, M, N and O are six teachers. Each one teaches a different subject out of Hindi, English, Math, Science, Social Science and Arts, NOT necessarily in the same order. Each of them teaches on only one day, from Monday to Saturday, NOT necessarily in the same order. J teaches Arts on Saturday. L teaches neither English nor Social Science, but he teaches on Thursday. Wednesday is reserved for Maths taught by K. O teaches Science a day before N. Social Science is taught a day before Arts. Which subject is taught on the day between Thursday and Saturday?

- Ans
- 1. Social Science
 - 2. Maths
 - 3. Science
 - 4. English

Question ID : 9895803374
Chosen Option : 4

Q.2 Select the option that is related to the third term in the same way as the second term is related to the first term.

4

Famous : Renowned :: Moisten : ?

- Ans
- 1. Drench
 - 2. Desire
 - 3. Debate
 - 4. Drink

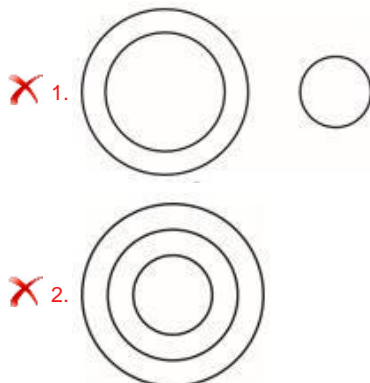
Question ID : 9895803368
Chosen Option : 2

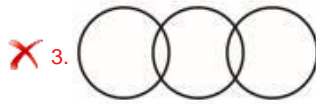
Q.2 Select the Venn diagram that best represents the given set of classes.

5

Whales, Bats, Mammals

Ans





Question ID : 9895803388
Chosen Option : 4

Q.2
6 Which of the following Union Territories is given partial statehood in India?

- Ans
1. Chandigarh
 2. Dadra and Nagar Haveli
 3. Daman Diu
 4. Puducherry

Question ID : 9895804948
Chosen Option : 1

Q.2
7 Malaria and Kala Azar are caused by:

- Ans
1. bacteria
 2. fungi
 3. protozoa
 4. virus

Question ID : 9895804940
Chosen Option : 1

Q.2
8 Choose the correct group of important Gods of the Vedic period.

- Ans
1. Brahma, Prajapati, Garuda
 2. Seshanaga, Chandra, Yama
 3. Varuna, Vishnu, Shiva
 4. Agni, Indra, Soma

Question ID : 9895804933
Chosen Option : 1

Q.2
9 Which of the following statements is NOT correct about the Tundra type of vegetation?

- Ans
1. Small shrubs are a part of this vegetation.
 2. Moss and lichens are found here.
 3. The growth of natural vegetation is limited here.
 4. It is found in a temperate region.

Question ID : 9895804936
Chosen Option : 4

Q.3
0 The Justice Rajendar Sachar Committee was set up by the Government of India to :

Ans 1.

study the condition of unorganized sector of Indian Economy.

2. study the conditions of National parks in India.

3. examine the status of India's foreign policy.

4.

examine the social and economic status of the Muslim community.

Question ID : 9895804947
Chosen Option : 1

Q.3
1 In the context of Elections in India, the term VVPAT stands for :

Ans 1. Voter Visit Poll Account Trail

2. Voter Vivid Press Audit Trail

3. Voter Verifiable Paper Audit Trail

4. Voter Verifiable Paper Account Trail

Question ID : 9895804944
Chosen Option : 3

Q.3
2 Which of the following places served as the venue for the closing ceremony of Pravasi Bharatiya Divas 2019?

Ans 1. Chandigarh

2. Pune

3. Varanasi

4. Kochi

Question ID : 9895804945
Chosen Option : 3

Q.3
3 The other name of the tertiary sector is :

Ans 1. service sector

2. primary sector

3. manufacturing sector

4. public sector

Question ID : 9895804951
Chosen Option : 1

Q.3
4 Bibi Ka Maqbara, the replica of the Taj Mahal is situated in :

Ans 1. Chandarnagar

2. Aurangabad

3. Ahmedabad

4. Cuttack

Question ID : 9895804928
Chosen Option : 3

Q.3 In the context of the Indian Constitution, which of the following Articles guarantees the Right to Freedom of Religion to its citizens?

- 5
- Ans
- 1. Article 14
 - 2. Article 25
 - 3. Article 32
 - 4. Article 22

Question ID : 9895804949
Chosen Option : 1

Q.3 The type of unemployment in the agricultural sector of India where more people are employed than required is known as:

- 6
- Ans
- 1. disguised unemployment
 - 2. seasonal unemployment
 - 3. structural unemployment
 - 4. marginal unemployment

Question ID : 9895804950
Chosen Option : 3

Q.3 Sandstone is an example of :

- 7
- Ans
- 1. non-foliated rock
 - 2. sedimentary rock
 - 3. igneous rock
 - 4. metamorphic rock

Question ID : 9895804935
Chosen Option : 4

Q.3 Which bridge connects Dibrugarh in Assam to Pasighat in Arunachal Pradesh?

- 8
- Ans
- 1. Naini
 - 2. Bogibeel
 - 3. Coronation
 - 4. Pamban

Question ID : 9895804946
Chosen Option : 2

Q.3 Food containing oil and fat, when kept for a longer time, causes a change in its taste and smell due to the process of _____.

- 9
- Ans
- 1. decomposition
 - 2. fermentation
 - 3. rancidity
 - 4. substitution

Question ID : 9895804943
Chosen Option : 1

Q.4 The Ryotwari System was introduced by:

0

- Ans
1. Warren Hastings
 2. Lord Cornwallis
 3. Thomas Munro
 4. Lord Ripon

Question ID : 9895804932
Chosen Option : 3

Q.4 With reference to the Mahatma Gandhi National Rural Employment Guarantee Act, which of the following statements
1 is NOT correct?

- Ans
1. It is also known as the Right to Work.
 2. It is implemented by the Ministry of Rural Development.
 3. It was initiated by the Government of India in 2009.
 4. It guarantees 100 days of work to the beneficiary.

Question ID : 9895804952
Chosen Option : 2

Q.4 The Bandipur National Park is located in which of the following states of India?
2

- Ans
1. Karnataka
 2. Tamil Nadu
 3. Odisha
 4. Chhattisgarh

Question ID : 9895804934
Chosen Option : 1

Q.4 Light Year is related to :
3

- Ans
1. weather
 2. distance
 3. sound
 4. speed

Question ID : 9895804941
Chosen Option : 1

Q.4 The _____ collects sound from the surroundings.

- Ans
1. auditory nerve
 2. tympanic membrane
 3. cochlea
 4. pinna

Question ID : 9895804939
Chosen Option : 1

Q.4 The 2018 Dronacharya Award for Table Tennis was given to :
5

- Ans
- 1.

2. Jivan Kumar Sharma

3. Vijaya Sharma

4. Tarak Sinha

Question ID : 9895804938
Chosen Option : 4

Q.4
6 The Lahore session of the Indian National Congress is significant because :

Ans 1. it passed the resolution to demand Poorna Swaraj.

2. it passed the resolution to start the Rowlatt Satyagraha.

3.

it passed the resolution to hold civil services examination in India.

4. it passed the resolution to boycott provincial elections.

Question ID : 9895804931
Chosen Option : 2

Q.4
7 After some days, statues of brass and bronze become green due to:

Ans 1. oxidation

2. corrosion

3. erosion

4. decomposition

Question ID : 9895804942
Chosen Option : 1

Q.4
8 The bronze sculpture of Nataraja was cast during the period of the:

Ans 1. Cheras

2. Pallavas

3. Cholas

4. Pandyas

Question ID : 9895804930
Chosen Option : 3

Q.4
9 'Bali Yatra', the voyage to Bali, is celebrated in which of the following states of India?

Ans 1. Tamil Nadu

2. Rajasthan

3. Kerala

4. Odisha

Question ID : 9895804929
Chosen Option : 4

Q.5
0 Which Indian cricketer has become the fastest bowler to claim 100 wickets in One-day Internationals as on January 2019?

Ans 1. Ishant Sharma

2. Umesh Yadav

3. Hardik Pandya

✓ 4. Mohammed Shami

Question ID : 9895804937
Chosen Option : 4

Q.5
1 What is the value of $\left[\left(\frac{1}{2} \div \frac{1}{4} - 4 \times \frac{1}{2} \times \frac{1}{3}\right) \text{ of } \left(\frac{2}{3} \div \frac{4}{3} + \frac{1}{2}\right)\right]$?

- Ans
- ✗ 1. $\frac{1}{2}$
 - ✗ 2. $\frac{5}{2}$
 - ✗ 3. $\frac{3}{4}$
 - ✓ 4. $\frac{4}{3}$

Question ID : 9895805029
Chosen Option : 1

Q.5
2 K alone can complete a work in 20 days and M alone can complete the same work in 30 days. K and M start the work together but K leaves the work after 5 days of the starting of work. In how many days M will complete the remaining work?

- Ans
- 1. 35/2 days
 - 2. 25/2 days
 - 3. 55/2 days
 - 4. 45/2 days

Question ID : 9895805044
Chosen Option : 2

Q.5
3 A sum becomes three times of itself in 10 years at the rate of simple interest. What is the rate of interest per annum?

- Ans
- ✗ 1. 25%
 - ✓ 2. 20%
 - ✗ 3. 15%
 - ✗ 4. 30%

Question ID : 9895805041
Chosen Option : 2

Q.5
4 The sum of the volume of two solid spheres is $1144/3 \text{ cm}^3$. If the sum of their radii is 7 cm, then what will be the difference of the radii?

- Ans
- ✗ 1. 4 cm
 - ✗ 2. 3 cm
 - ✗ 3. 2 cm
 - ✓ 4. 1 cm

Question ID : 9895805049
Chosen Option : 2

Q.5

5 Rohit, Mohit and Sumit individually can complete a work in 8 days, 14 days and 21 days respectively. In how many days these three together can complete the same work?

- Ans
1. 156/43 days
 2. 168/41 days
 3. 168/43 days
 4. 156/41 days

Question ID : 9895805043
Chosen Option : 4

Q.5
6 What is the mode of the given data?

3, 0, 1, 0, 2, 1, 2, 0, 1, 2, 1, 1, 1, 3, 2

- Ans
1. 1
 2. 0
 3. 2
 4. 3

Question ID : 9895805034
Chosen Option : 1

Q.5
7 If a number is divided by 14, then it becomes equal to 10% of the second number. First number is how much percent more than the second number?

- Ans
1. 40%
 2. 45%
 3. 60%
 4. 30%

Question ID : 9895805035
Chosen Option : 1

Q.5
8 If selling price of an article is ₹638 and profit is 45%, then what will be the net profit?

- Ans
1. ₹256
 2. ₹287.1
 3. ₹440
 4. ₹198

Question ID : 9895805036
Chosen Option : 3

Q.5
9 If Sohan is driving a bike at a speed of 25 m/s, then in how much time Sohan will cover a distance of 540 km?

- Ans
1. 7 hr
 2. 5 hr
 3. 21.6 hr
 4. 6 hr

Question ID : 9895805045
Chosen Option : 4

Q.6 The area of a square and a rectangle are equal. The length of the rectangle is greater than the side of a square by 5 cm and its breadth is less than the side of square by 4 cm. What will be the perimeter of the rectangle?

- Ans 1. 84 cm
 2. 82 cm
 3. 76 cm
 4. 72 cm

Question ID : 9895805048
Chosen Option : 1

Q.6 The ratio of two numbers is 13 : 20. If the difference between them is 189, then what is the smaller of the two numbers?
1

- Ans 1. 279
 2. 221
 3. 297
 4. 351

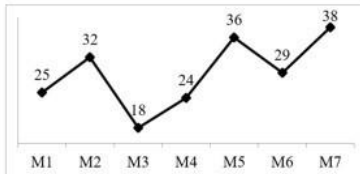
Question ID : 9895805038
Chosen Option : 2

Q.6 Marked price of an article is 40% more than its cost price. If 50% discount is given on the article, then selling price is
2 what percent of the cost price?

- Ans 1. 78%
 2. 70%
 3. 93%
 4. 84%

Question ID : 9895805033
Chosen Option : 1

Q.6 The line chart given below shows the production (in 10000s) of cars in 7 different months.
3



What is the average monthly production for the given 7 months?

- Ans 1. 32.2 (in 10000s)
 2. 21.6 (in 10000s)
 3. 23.5 (in 10000s)
 4. 28.8 (in 10000s)

Question ID : 9895805051
Chosen Option : 1

Q.6
4

The table given below shows the marks obtained by 4 students in 5 subjects. The maximum marks of each subject is 100.

Subjects	Students			
	P1	P2	P3	P4
S1	89	100	92	91
S2	62	52	72	37
S3	57	55	70	65
S4	76	85	76	58
S5	85	70	66	62

What are the average marks per subject obtained by P2?

- Ans 1. 72.4
 2. 75.8
 3. 70.6
 4. 74.6

Question ID : 9895805052
 Chosen Option : 1

Q.6
 5 What is the value of $\left[45 \text{ of } \left(\frac{3}{7} \div \frac{15}{14}\right) - \left(6\frac{1}{2} \div 3 - 4\right) + 2\right] ?$

- Ans 1. $\frac{131}{6}$
 2. $\frac{147}{11}$
 3. $\frac{109}{6}$
 4. $\frac{33}{7}$

Question ID : 9895805030
 Chosen Option : 3

Q.6
 6 If Mohit can cover a distance of 1872 km in 26 hours, then what is the speed of Mohit?

- Ans 1. 36 m/s
 2. 20 m/s
 3. 24 m/s
 4. 72 m/s

Question ID : 9895805046
 Chosen Option : 2

Q.6
 7 A person purchases calculators at the rate of ₹345 per calculator. If he sells calculators on 40% loss then what will be the selling price of 28 calculators?

- Ans 1. ₹6872
 2. ₹8657
 3. ₹13524

✓ 4. ₹5796

Question ID : 9895805037
Chosen Option : 1

Q.6 Height of a right circular cylinder is 20 cm. If the radius is its base 14 cm, then what will be the curved surface area of the cylinder?

- Ans
1. 1940 cm²
 2. 2120 cm²
 3. 1760 cm²
 4. 1880 cm²

Question ID : 9895805047
Chosen Option : 4

Q.6 The average salary of managers is x and the average salary of workers is y . The number of the managers is 15 times of the number of workers. What is average salary of managers and workers together?

- Ans
1. $(15x + y)/16$
 2. $(15x + y)/(x + y)$
 3. $(x + 15y)/(x + y)$
 4. $(x + 15y)/16$

Question ID : 9895805032
Chosen Option : 3

Q.7 The average weight of 10 articles is 65 kg. If three articles having an average weight of 72 kg are removed, then what will be new average weight of the remaining articles?

- Ans
1. 58 kg
 2. 65 kg
 3. 71 kg
 4. 62 kg

Question ID : 9895805031
Chosen Option : 3

Q.7 P, Q and R invest ₹14000, ₹18000 and ₹24000 respectively to start a business. If the profit at the end of the year is ₹25480, then what is difference between the share of P and Q?

- Ans
1. ₹2670
 2. ₹3480
 3. ₹1820
 4. ₹2140

Question ID : 9895805040
Chosen Option : 3

Q.7 What will be the highest number which when divides 52 and 104 leaves remainder 4 and 8 respectively?

- Ans
1. 12
 2. 48
 3. 16

4. 26

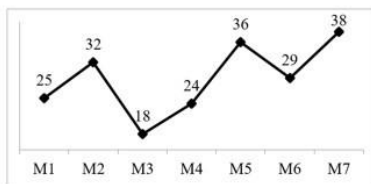
Question ID : 9895805028
Chosen Option : 3

Q.7
3 If $x : y = 5 : 4$, then what will be the ratio of $(x/y) : (y/x)$?

- Ans 1. 25 : 16
 2. 16 : 25
 3. 4 : 5
 4. 5 : 4

Question ID : 9895805039
Chosen Option : 3

Q.7
4 The line chart given below shows the production (in 10000s) of cars in 7 different months.



Production of cars in month M2 is how much percent more than the production of cars in month M1?

- Ans 1. 25%
 2. 37.5%
 3. 33.33%
 4. 28%

Question ID : 9895805050
Chosen Option : 3

Q.7
5 A sum of ₹4500 is lent at compound interest. If the rate of interest is 10% per annum (interest is compounded annually), then what will be the amount after 3 years?

- Ans 1. ₹5989.5
 2. ₹5689.5
 3. ₹5686.5
 4. ₹5889.5

Question ID : 9895805042
Chosen Option : 1

Section : English Language

Q.1 Select the most appropriate option to substitute the underlined segment in the given sentence. If there is no need to substitute it, select No Improvement.

The prince was told kill the dragon, but in order to do so, he had to cross the Forbidden Mountain.

- Ans 1. was told killing the dragon
 2. No improvement
 3. was told too kill the dragon
 4. was told to kill the dragon

Question ID : 9895804491
Chosen Option : 1

Q.2 From the given options, identify the segment in the sentence which contains the grammatical error.

Ten years since Mohit left India and started working for the betterment of the downtrodden people.

- Ans
1. Ten years since
 2. the betterment of
 3. started working for
 4. Mohit left India

Question ID : 9895804488
Chosen Option : 4

Q.3 Select the option that means the same as the given idiom.

At the drop of a hat

- Ans
1. Instantly
 2. Lately
 3. Slowly
 4. Seldom

Question ID : 9895804506
Chosen Option : 3

Q.4 Select the correctly spelt word.

- Ans
1. Calander
 2. Calendar
 3. Calandar
 4. Calender

Question ID : 9895804511
Chosen Option : 4

Q.5 Select the most appropriate option to fill in the blank.

The film we saw last night was boring. I wish I _____ seen it.

- Ans
1. didn't
 2. hadn't
 3. shouldn't
 4. wouldn't have

Question ID : 9895804495
Chosen Option : 1

Q.6 Select the correctly spelt word.

- Ans
1. Mentainance
 2. Maintainance
 3. Maintainence
 4. Maintenance

Question ID : 9895804510
Chosen Option : 2

Q.7 Select the antonym of the given word.

BOISTEROUS

- Ans
1. Aggravated
 2. Incompetent
 3. Restrained
 4. Exuberant

Question ID : 9895804504
Chosen Option : 1

Q.8 Select the word which means the same as the group of words given.

A person who thinks he/she is the best.

- Ans
1. Eccentric
 2. Egoist
 3. Selfish
 4. Garrulous

Question ID : 9895804872
Chosen Option : 1

Q.9 Select the most appropriate option to substitute the underlined segment in the given sentence. If there is no need to substitute it, select No Improvement.

The mobile company changed their handsets last year, and by doing so they have managed to improve their sale.

- Ans
1. No improvement
 2. improve the sale
 3. improve their sales
 4. improved their sales

Question ID : 9895804492
Chosen Option : 4

Q.1
0 Select the synonym of the given word.

AMIABLE

- Ans
1. Cheerful
 2. Bashful
 3. Hostile
 4. Friendly

Question ID : 9895804503
Chosen Option : 4

Q.1
1 Select the most appropriate option to substitute the underlined segment in the given sentence. If there is no need to substitute it, select No Improvement.

Don't use those pencils; use the one we bought in Portugal.

- Ans 1. No improvement
 2. use this ones
 3. use one
 4. use the ones

Question ID : 9895804493
Chosen Option : 2

Q.1
2 Select the synonym of the given word.

TURBULENT

- Ans 1. Violent
 2. Miserable
 3. Accurate
 4. Troublesome

Question ID : 9895804502
Chosen Option : 1

Q.1
3 From the given options, identify the segment in the sentence which contains the grammatical error.

If I am a bird, I would fly and explore the world.

- Ans 1. I would fly
 2. and explore
 3. If I am
 4. the world

Question ID : 9895804490
Chosen Option : 3

Q.1
4 Select the most appropriate word to fill in the blank.

Beware of him. He is as sly as a _____.

- Ans 1. goat
 2. rabbit
 3. snail
 4. fox

Question ID : 9895804513
Chosen Option : 3

Comprehension:

In the following passage some words have been deleted. Fill in the blanks with the help of the alternatives given.

Most animals have their own habitats _____ (1) some make long journeys from one region to another. This _____ (2) called migration. It takes place at a particular _____ (3) of the year. Birds are the best-known _____ (4) but many other animals also migrate to places with _____ (5) climate.

Q.1
5 Select the most appropriate option to fill in blank number (1).

- Ans 1. but
 2. because
 3. so
 4. as

Question ID : 9895804497
Chosen Option : 1

Comprehension:

In the following passage some words have been deleted. Fill in the blanks with the help of the alternatives given.

Most animals have their own habitats _____ (1) some make long journeys from one region to another. This _____ (2) called migration. It takes place at a particular _____ (3) of the year. Birds are the best-known _____ (4) but many other animals also migrate to places with _____ (5) climate.

SubQuestion No : 16

Q.1
6 Select the most appropriate option to fill in blank number (2).

- Ans 1. are
 2. were
 3. is
 4. was

Question ID : 9895804498
Chosen Option : 3

Comprehension:

In the following passage some words have been deleted. Fill in the blanks with the help of the alternatives given.

Most animals have their own habitats _____ (1) some make long journeys from one region to another. This _____ (2) called migration. It takes place at a particular _____ (3) of the year. Birds are the best-known _____ (4) but many other animals also migrate to places with _____ (5) climate.

SubQuestion No : 17

Q.1
7 Select the most appropriate option to fill in blank number (3).

- Ans 1. season
 2. time
 3. month
 4. part

Question ID : 9895804499
Chosen Option : 1

Comprehension:

In the following passage some words have been deleted. Fill in the blanks with the help of the alternatives given.

Most animals have their own habitats _____ (1) some make long journeys from one region to another. This _____ (2) called migration. It takes place at a particular _____ (3) of the year. Birds are the best-known _____ (4) but many other animals also migrate to places with _____ (5) climate.

SubQuestion No : 18

Q.1
8 Select the most appropriate option to fill in blank number (4).

- Ans
- 1. visitors
 - 2. migrants
 - 3. travellers
 - 4. tourists

Question ID : 9895804500
Chosen Option : 4

Comprehension:

In the following passage some words have been deleted. Fill in the blanks with the help of the alternatives given.

Most animals have their own habitats _____ (1) some make long journeys from one region to another. This _____ (2) called migration. It takes place at a particular _____ (3) of the year. Birds are the best-known _____ (4) but many other animals also migrate to places with _____ (5) climate.

SubQuestion No : 19

Q.1
9 Select the most appropriate option to fill in blank number (5).

- Ans
- 1. extreme
 - 2. favourable
 - 3. harsh
 - 4. cold

Question ID : 9895804501
Chosen Option : 1

Q.2
0 Select the antonym of the given word.

URGE

- Ans
- 1. Deter
 - 2. Persuade
 - 3. Triumph
 - 4. Request

Question ID : 9895804505

Q.2
1 Select the most appropriate option to fill in the blank.

When she bid farewell to her parents, her eyes were full _____ tears.

- Ans
- 1. with
 - 2. of
 - 3. from
 - 4. by

Question ID : 9895804494
Chosen Option : 4

Q.2
2 From the given options, identify the segment in the sentence which contains the grammatical error.

He cannot speak Spanish because he was born and brought up in Spain.

- Ans
- 1. born and brought up
 - 2. He cannot speak
 - 3. because he was
 - 4. in Spain.

Question ID : 9895804489
Chosen Option : 1

Q.2
3 Select the word which means the same as the group of words given.

A life history written by somebody else

- Ans
- 1. Autobiography
 - 2. Museology
 - 3. Biography
 - 4. Bibliography

Question ID : 9895804509
Chosen Option : 1

Q.2
4 Select the option that means the same as the given idiom.

Spill the beans

- Ans
- 1. To keep the secret
 - 2. To be productive
 - 3. To leak the secret
 - 4. To be clumsy

Question ID : 9895804507
Chosen Option : 1

Q.2
5 Select the most appropriate word to fill in the blank.

Let us go for a picnic today. The _____ is very pleasant.

- Ans
- 1. atmosphere
 - 2. climate
 - 3. weather
 - 4. season

Question ID : 9895804512
Chosen Option : 2

Section : Hindi Language

Q.1 दिए गए शब्द के पर्यायवाची शब्द का चयन करें।

सर्प

- Ans
- 1. देवता
 - 2. भूधर
 - 3. भुजंग
 - 4. भूमि

Question ID : 9895804047
Chosen Option : --

Q.2 दिये गये वाक्यांश के लिए एक शब्द दीजिये।

साथ काम करने वाला

- Ans
- 1. सहकर्मी
 - 2. सहकर्म
 - 3. सहधर्मी
 - 4. सहयोग

Question ID : 9895804050
Chosen Option : --

Q.3 सही वर्तनी वाले शब्द का चयन करें।

- Ans
- 1. विद्यार्थि
 - 2. विद्यार्थी
 - 3. विद्यर्थी
 - 4. वीद्यार्थी

Question ID : 9895804053
Chosen Option : --

Q.4

दिए गए वाक्य में रेखांकित खंड को प्रतिस्थापित करने के लिए सबसे उपयुक्त विकल्प का चयन करें।

अध्यापिका को परीक्षा के लिए महत्वपूर्ण प्रश्न कराये।

Ans

1. अध्यापिका ने
2. अध्यापिका के
3. अध्यापिका का
4. अध्यापिका के लिए

Question ID : 9895804032

Chosen Option : --

Q.5 रिक्त स्थान को भरने के लिए सबसे उपयुक्त शब्द का चयन करें।

आज मौसम बहुत _____ है।

Ans

1. बीमार
2. सुहाना
3. दुर्गंध
4. सुगंध

Question ID : 9895804037

Chosen Option : --

Q.6 रिक्त स्थान को भरने के लिए सबसे उपयुक्त शब्द का चयन करें।

समय पर बिल का भुगतान करें _____ बिजली काट दी जाएगी।

Ans

1. लेकिन
2. या
3. अन्यथा
4. परंतु

Question ID : 9895804035

Chosen Option : --

Q.7 दिए गए वाक्य का वह भाग ज्ञात करें जिसमें कोई त्रुटि है।

हम जिस वस्तु की कामना करते हैं उसी से हमारे कर्म की उत्पत्ति होता है।

Ans

1. उसी से हमारे कर्म की
2. हम जिस वस्तु की

✗ 3. उत्पत्ति होता है।

4. कामना करते हैं

Question ID : 9895804029
Chosen Option : --

Q.8 दिए गए वाक्य का वह भाग ज्ञात करें जिसमें कोई त्रुटि है।

अपने से अधिक दूसरों का व्यथा से वे अधिक पीड़ित थे।

Ans

1. अपने से अधिक
2. वे अधिक
3. दूसरों का व्यथा से
4. पीड़ित थे।

Question ID : 9895804028
Chosen Option : --

Q.9 दिए गए शब्द का विलोम चुनें।

जीवन

Ans

- ✗ 1. जरा
2. सचेत
3. सम्मोहन
- ✗ 4. मरण

Question ID : 9895804045
Chosen Option : --

Q.10 सही वर्तनी वाले शब्द का चयन करें।

Ans

1. निर्यात
2. निर्यात
3. निरयात
4. नीर्यात

Question ID : 9895804052
Chosen Option : --

Q.11 रिक्त स्थान को भरने के लिए सबसे उपयुक्त शब्द का चयन करें।

अधिक जनसंख्या भारत के लिए _____ है।

Ans

1. त्रासदी

2. मोक्ष
 3. नियम
 4. अभिशाप

Question ID : 9895804034
Chosen Option : --

Q.1
2 दिए गए वाक्य में रेखांकित खंड को प्रतिस्थापित करने के लिए सबसे उपयुक्त विकल्प का चयन करें।

मैं जिस भारतीय प्रजातंत्र की कल्पना करता हूँ, उसका अध्यक्ष कोई किसान ही होगा।

- Ans
1. उसकी अध्यक्ष कोई किसान होगा।
 2. उनका अध्यक्ष भी किसान होगा।
 3. उसका अध्यक्ष कोई किसान ही होगा।
 4. उसकी अध्यक्ष कोई किसान होगी।

Question ID : 9895804031
Chosen Option : --

Q.1
3 दिये गये वाक्यांश के लिए एक शब्द दीजिये।

आकाश को छूने वाला

- Ans
1. गगन
 2. आकाशीय
 3. खगोलीय
 4. गगनचुंबी

Question ID : 9895804051
Chosen Option : --

Q.1
4 रिक्त स्थान को भरने के लिए सबसे उपयुक्त शब्द का चयन करें।

आपके दर्शन _____ हैं।

- Ans
1. पानी
 2. कल
 3. सामने
 4. दुर्लभ

Question ID : 9895804036
Chosen Option : --

Q.1
5

दिए गए शब्द के पर्यायवाची शब्द का चयन करें।

पाणि

- Ans
- 1. पत्ता
 - 2. पत्र
 - 3. पानी
 - 4. हाथ

Question ID : 9895804046
Chosen Option : --

Comprehension:

निम्नलिखित गद्यांश के रिक्त स्थानों की पूर्ति गद्यांश के नीचे दिए गए प्रश्नों के अनुसार कीजिए -

कभी हमारा देश सांस्कृतिक _____(1) के पद पर आसीन था। 'विश्व गुरु' होने के नाते इस देश ने समूचे _____(2) को मानवता, नैतिकता और सदाचार की शिक्षा दी। अनेक ग्रन्थ इसके _____(3) हैं। लेकिन समय के साथ हम _____(4) मूल्यों को भूलने लगे। आज भी समाज में नैतिक मूल्यों की _____(5) देखने को मिलती है।

SubQuestion No : 16

Q.1
6 गद्यांश में संकेतित रिक्त स्थान (1) के लिए उपयुक्त शब्द होगा

- Ans
- 1. गुरु
 - 2. अध्येता
 - 3. वक्ता
 - 4. उपदेशक

Question ID : 9895804039
Chosen Option : --

Comprehension:

निम्नलिखित गद्यांश के रिक्त स्थानों की पूर्ति गद्यांश के नीचे दिए गए प्रश्नों के अनुसार कीजिए -

कभी हमारा देश सांस्कृतिक _____(1) के पद पर आसीन था। 'विश्व गुरु' होने के नाते इस देश ने समूचे _____(2) को मानवता, नैतिकता और सदाचार की शिक्षा दी। अनेक ग्रन्थ इसके _____(3) हैं। लेकिन समय के साथ हम _____(4) मूल्यों को भूलने लगे। आज भी समाज में नैतिक मूल्यों की _____(5) देखने को मिलती है।

SubQuestion No : 17

Q.1
7 गद्यांश में संकेतित रिक्त स्थान (2) के लिए उपयुक्त शब्द होगा

Ans

1. यूनान
2. यूरोप
3. विश्व
4. अमेरिका

Question ID : 9895804040
Chosen Option : --

Comprehension:

निम्नलिखित गद्यांश के रिक्त स्थानों की पूर्ति गद्यांश के नीचे दिए गए प्रश्नों के अनुसार कीजिए -

कभी हमारा देश सांस्कृतिक _____(1) के पद पर आसीन था। 'विश्व गुरु' होने के नाते इस देश ने समूचे _____(2) को मानवता, नैतिकता और सदाचार की शिक्षा दी। अनेक ग्रन्थ इसके _____(3) हैं। लेकिन समय के साथ हम _____(4) मूल्यों को भूलने लगे। आज भी समाज में नैतिक मूल्यों की _____(5) देखने को मिलती है।

SubQuestion No : 18

Q.1
8 गद्यांश में संकेतित रिक्त स्थान (3) के लिए उपयुक्त शब्द होगा

Ans

1. साक्षी
2. प्रभाव
3. प्रकाश
4. परिमाण

Question ID : 9895804041
Chosen Option : --

Comprehension:

निम्नलिखित गद्यांश के रिक्त स्थानों की पूर्ति गद्यांश के नीचे दिए गए प्रश्नों के अनुसार कीजिए -

कभी हमारा देश सांस्कृतिक _____(1) के पद पर आसीन था। 'विश्व गुरु' होने के नाते इस देश ने समूचे _____(2) को मानवता, नैतिकता और सदाचार की शिक्षा दी। अनेक ग्रन्थ इसके _____(3) हैं। लेकिन समय के साथ हम _____(4) मूल्यों को भूलने लगे। आज भी समाज में नैतिक मूल्यों की _____(5) देखने को मिलती है।

SubQuestion No : 19

Q.1
9 गद्यांश में संकेतित रिक्त स्थान (4) के लिए उपयुक्त शब्द होगा

Ans

1. मानसिक
2. राजनीतिक

3. नैतिक
4. भौतिक

Question ID : 9895804042
Chosen Option : --

Comprehension:

निम्नलिखित गद्यांश के रिक्त स्थानों की पूर्ति गद्यांश के नीचे दिए गए प्रश्नों के अनुसार कीजिए -

कभी हमारा देश सांस्कृतिक _____(1) के पद पर आसीन था। 'विश्व गुरु' होने के नाते इस देश ने समूचे _____(2) को मानवता, नैतिकता और सदाचार की शिक्षा दी। अनेक ग्रन्थ इसके _____(3) हैं। लेकिन समय के साथ हम _____(4) मूल्यों को भूलने लगे। आज भी समाज में नैतिक मूल्यों की _____(5) देखने को मिलती है।

SubQuestion No : 20

Q.2
0 गद्यांश में संकेतित रिक्त स्थान (5) के लिए उपयुक्त शब्द होगा

- Ans
- ✓ 1. पूर्णता
 2. अधिकता
 - ✗ 3. कमी
 - ✗ 4. उत्थान

Question ID : 9895804043
Chosen Option : --

Q.2
1 दिए गए वाक्य का वह भाग ज्ञात करें जिसमें कोई त्रुटि है।

समय वह धन है जिसका दुरुपयोग करने से वह व्यर्थ चली जाती है।

- Ans
1. व्यर्थ चली जाती है।
 2. जिसका दुरुपयोग
 3. करने से वह
 4. समय वह धन है

Question ID : 9895804030
Chosen Option : --

Q.2
2 दिए गए वाक्य में रेखांकित खंड को प्रतिस्थापित करने के लिए सबसे उपयुक्त विकल्प का चयन करें।

कल मैं दिल्ली से वापस जयपुर गई थी, यहाँ से आगरा गई थी।

- Ans
1. वहाँ पर आगरा गई थी।

2. यहाँ आगरा पर गई।
3. वहाँ से आगरा गई थी।
4. यहाँ पर आगरा गई थी।

Question ID : 9895804033
Chosen Option : --

Q.2
3 निम्नलिखित में से उस विकल्प का चयन करें जो 'गागर में सागर भरना' मुहावरे का अर्थ व्यक्त करता है।

Ans

1. कम विचार आना
2. थोड़े शब्दों में अधिक कहना
3. अधिक शब्दों में अधिक विचार
4. गागर से सागर को भरना

Question ID : 9895804048
Chosen Option : --

Q.2
4 निम्नलिखित में से उस विकल्प का चयन करें जो 'घाव पर नमक छिड़कना' मुहावरे का अर्थ व्यक्त करता है।

Ans

1. दुखी व्यक्ति को दिलासा देना
2. बीती बातें याद करना
3. घाव के ऊपर नमक छिड़क देना
4. कष्ट को और बढ़ाना

Question ID : 9895804049
Chosen Option : --

Q.2
5 दिए गए शब्द का विलोम चुनें।

जागरण

Ans

1. निद्रा
2. सचेत
3. जागना
4. अनिद्रा

Question ID : 9895804044
Chosen Option : --