

**SSC
GD**

Previous Year Paper
15 Dec 2021 Shift 1
English

Exam Date	15/12/2021
Exam Time :	9:00 AM - 10:30 AM
Subject	Constable GD 2021

Section : Part A General Intelligence and Reasoning

Q.1 Study the given pattern carefully and select the number that can replace the question mark (?) in it.

14 12 15
11 17 16
180 234 ?

- Ans 1. 272
 2. 369
 3. 298
 4. 425

Question ID : 65497830770
Status : Answered
Chosen Option : 1

Q.2 In a certain code language, the word 'DISK' is written as 'LTJE'. How will 'SFWP' be written in that language?

- Ans 1. REVO
 2. TGXQ
 3. OVER
 4. QXGT

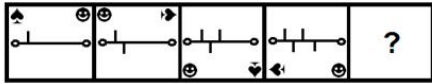
Question ID : 65497830768
Status : Answered
Chosen Option : 4

Q.3 'Monarch' is related to 'Butterfly' in the same way as 'Mamba' is related to '_____':


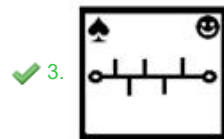
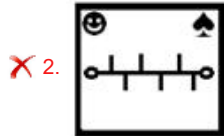
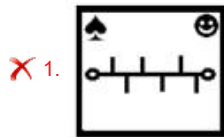
- Ans 1. Venom
 2. Snake
 3. Queen
 4. Royal

Question ID : 65497830765
Status : Answered
Chosen Option : 2

Q.4 Select the figure from among the given options that can replace the question mark (?) in the following series.



Ans



Question ID : 65497830776

Status : Answered

Chosen Option : 3

Q.5 Select the option that is related to the fourth number in the same way as the first number is related to the second number and the fifth number is related to the sixth number.

4523 : 22 :: ? : 14 :: 9178 : 13

Ans ✗ 1. 8228

✗ 2. 7448

✗ 3. 9152

✓ 4. 5440

Question ID : 65497830753

Status : Answered

Chosen Option : 2

Q.6 Select the correct option that indicates the arrangement of the given words in the order in which they appear in an English dictionary.

1. Congrats
2. Confusion
3. Confound
4. Congregate
5. Confucian

Ans ✗ 1. 3, 2, 5, 1, 4

✓ 2. 3, 5, 2, 1, 4

✗ 3. 3, 1, 4, 5, 2

✗ 4. 3, 4, 1, 5, 2

Question ID : 65497830773

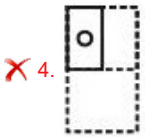
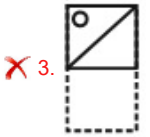
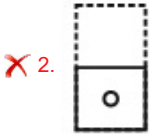
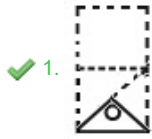
Status : Answered

Chosen Option : 2

Q.7 A paper sheet is folded in a particular manner and several punches are made. When unfolded the paper sheet looks like the question figure. From the given options, select the figure that follows the manner in which the paper is folded and punched.



Ans



Question ID : 65497830772

Status : Answered

Chosen Option : 1

Q.8 Which two signs should be interchanged to make the given equation correct?

$$15 \times 6 + 132 - 11 \div 44 = 58$$

- Ans**
- ✗ 1. + and ×
 - ✗ 2. + and ÷
 - ✓ 3. ÷ and –
 - ✗ 4. × and ÷

Question ID : 65497830754

Status : Answered

Chosen Option : 3

Q.9 Select the option that is related to the third letter-cluster in the same way as the second letter-cluster is related to the first letter-cluster.

PVSD : TYUE :: DPKR : ?

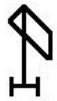
- Ans**
- ✗ 1. GTNS
 - ✗ 2. HTMS
 - ✓ 3. HSMS
 - ✗ 4. ISNS

Question ID : 65497830757

Status : Answered

Chosen Option : 3

Q.10 Select the option in which the given figure is embedded (rotation is NOT allowed).



Ans

✗ 1.



✗ 2.



✓ 3.



✗ 4.



Question ID : 65497830756
 Status : Answered
 Chosen Option : 3

Q.11 Select the correct mirror image of the given figure when the mirror is placed at 'XY' as shown.



Ans

✗ 1.



✗ 2.



✓ 3.



✗ 4.



Question ID : 65497830763
 Status : Answered
 Chosen Option : 3

Q.12 Select the set of classes the relationship among which is best illustrated by the given Venn diagram.



- Ans
- 1. Citizen, Uneducated, Advocates
 - 2. Brothers, Cricketers, Men
 - 3. Sofa, Furniture, Book
 - 4. Sharks, Whales, Toads

Question ID : 65497830767
Status : Answered
Chosen Option : 1

Q.13 Five persons are sitting in a row. D and H are the two persons at the extreme end. L is to the right of P. T is to the left of the H. What is the position of L from the left?

- Ans
- 1. First
 - 2. Second
 - 3. Third
 - 4. Fourth

Question ID : 65497830766
Status : Answered
Chosen Option : 2

Q.14 Select the letter-cluster from among the given options that can replace the question mark (?) in the following series.

GLQ, VAF, KPU, ZEJ, ?

- Ans
- 1. OUZ
 - 2. OTY
 - 3. PTY
 - 4. PUY

Question ID : 65497830764
Status : Answered
Chosen Option : 2

Q.15 Select the number from among the given options that can replace the question mark (?) in the following series.

14, 14, 15, 23, 87, 212, ?

- Ans
- 1. 482
 - 2. 428
 - 3. 284
 - 4. 248

Question ID : 65497830775
Status : Answered
Chosen Option : 2

Q.16 Four letter-clusters have been given, out of which three are alike in some manner and one is different. Select the odd one.

- Ans 1. RNJF
 2. XTPL
 3. MIEA
 4. TPLI

Question ID : 65497830760
Status : Answered
Chosen Option : 4

Q.17 Select the number from among the given options that can replace the question mark (?) in the following series.

6, 5, 7, 7, 10, 11, 15, 17, ?

- Ans 1. 22
 2. 25
 3. 24
 4. 23

Question ID : 65497830762
Status : Answered
Chosen Option : 1

Q.18 Eight friends, A, B, C, D, E, F, G and H, are sitting clockwise around a circular table in the same sequence, facing the centre, at equal distance between them. C is facing the north direction. Now if D leaves his place and a new friend Y occupies D's place, then which of the following two persons are sitting opposite each other?

- Ans 1. Y and B
 2. C and H
 3. B and F
 4. F and A

Question ID : 65497830752
Status : Answered
Chosen Option : 3

Q.19 Pointing to Kiran, Rohan says, "She is the daughter of the only son of my grandfather." How is Kiran related to Rohan?

- Ans 1. Mother
 2. Daughter-in-law
 3. Wife
 4. Sister

Question ID : 65497830759
Status : Answered
Chosen Option : 4

Q.20 Select the combination of letters that when sequentially placed in the blanks of the given series will complete the series.

KP_LMK_TL_KPT_M_PT_M

- Ans 1. T, P, M, L, K, L
 2. P, K, L, T, M, L
 3. P, T, L, K, M, L
 4. T, P, L, M, L, K

Question ID : 65497830774
Status : Answered
Chosen Option : 1

Q.21 Read the given statements and conclusions carefully. Assuming that the information given in the statements is true, even if it appears to be at variance with commonly known facts, decide which of the given conclusions logically follow(s) from the statements.

Statements:

- I. All grills are ovens.
II. Some tandoors are grills.

Conclusions:

- I. Some tandoors are oven.
II. All ovens are tandoor.

- Ans 1. Only conclusion II follows.
 2. Only conclusion I follows.
 3. Both conclusions I and II follow.
 4. Neither conclusion I nor II follows.

Question ID : 65497830769
Status : Answered
Chosen Option : 4

Q.22 In a certain code language, MORALE is coded as 1315181125. How will VALUES be coded in that language?

- Ans 1. 2211221519
 2. 1951221122
 3. 2121212519
 4. 1125185131

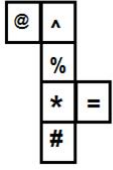
Question ID : 65497830761
Status : Answered
Chosen Option : 1

Q.23 In a certain code language, 'HEROIC' is written as 'KBULLZ'. How will 'VALIANT' be written in that language?

- Ans 1. YXOLXQQ
 2. YXOFDKW
 3. YXOEDLW
 4. TCJLYPS

Question ID : 65497830758
Status : Answered
Chosen Option : 2

Q.24 A cube is made by folding the given sheet. In the cube so formed, which pair of symbols will be on opposite faces?



- Ans
- 1. # and =
 - 2. @ and %
 - 3. @ and =
 - 4. % and *

Question ID : 65497830755
Status : Answered
Chosen Option : 3

Q.25 How many terms of the series 53, 57, 61, 65 Need to be taken so that their sum is 1106?

- Ans
- 1. 15
 - 2. 20
 - 3. 14
 - 4. 21

Question ID : 65497830771
Status : Answered
Chosen Option : 3

Section : Part B General Knowledge and General Awareness

Q.1 In which year was the Sahitya Akademi Award started?

- Ans
- 1. 1955
 - 2. 1954
 - 3. 1956
 - 4. 1953

Question ID : 65497830790
Status : Answered
Chosen Option : 3

Q.2 In which year was the English Education Act introduced to make English the medium of instruction for higher education and to stop the promotion of oriental institutions?

- Ans
- 1. 1835
 - 2. 1830
 - 3. 1854
 - 4. 1833

Question ID : 65497830785
Status : Answered
Chosen Option : 1

Q.3 Who among the following sportspersons received the prestigious Rajiv Gandhi Khel Ratna Award in August 2020?

- Ans 1. Atanu Das
 2. Mariyappan T
 3. Naresh Kumar
 4. Romesh Pathania

Question ID : 65497830801
Status : Answered
Chosen Option : 2

Q.4 Which of the following insects has a pigment called 'luciferin'?

- Ans 1. Butterfly
 2. Redfly
 3. Nightfly
 4. Firefly

Question ID : 65497830779
Status : Answered
Chosen Option : 3

Q.5 Who was appointed as the director of the Indian National Centre for Ocean Information System in 2020?

- Ans 1. Vinay Mohan Kwatra
 2. Srinivasa Kumar Tummala
 3. BV Satyanarayana
 4. S Nageswara Rao

Question ID : 65497830787
Status : Answered
Chosen Option : 4

Q.6 Which of the following is a water-borne disease?

- Ans 1. Cholera
 2. Common cold
 3. Mumps
 4. Pneumonia

Question ID : 65497830797
Status : Answered
Chosen Option : 1

Q.7 Which among the following became the first Indian Airport to launch an e-boarding facility for passengers on International flights?

- Ans 1. GMR Hyderabad International Airport
 2. Indira Gandhi International Airport, Delhi
 3. Sardar Vallabhbhai Patel International Airport, , Gujarat
 4. Dabolim Airport, Goa

Question ID : 65497830793
Status : Answered
Chosen Option : 2

Q.8 Which of the following terms is used to describe the outside layer of skin on the human body?

- Ans
- 1. Keratin
 - 2. Larynx
 - 3. Epidermis
 - 4. Quadriceps

Question ID : 65497830778
Status : Answered
Chosen Option : 3

Q.9 In Australian Open 2020 Tennis Tournament who won the Men's Singles title?

- Ans
- 1. Rafael Nadal
 - 2. Dominic Thiem
 - 3. Alexander Zverev
 - 4. Novak Djokovic

Question ID : 65497830783
Status : Answered
Chosen Option : 4

Q.10 Salal Hydroelectric Power Station is built on which of the following rivers?

- Ans
- 1. Chenab
 - 2. Bhagirathi
 - 3. Jhelum
 - 4. Kosi

Question ID : 65497830800
Status : Answered
Chosen Option : 3

Q.11 The Cabinet Committee on Economic Affairs (CCEA) announced the highest increase in (MSP) for _____ for the Rabi Marketing Season 2020-21.

- Ans
- 1. wheat
 - 2. mustard
 - 3. barley
 - 4. lentil

Question ID : 65497830794
Status : Answered
Chosen Option : 1

Q.12 The 'Pattachitra' style of painting is a popular art form associated with the state of:

- Ans
- 1. Bihar
 - 2. Rajasthan
 - 3. Odisha
 - 4. Uttar Pradesh

Question ID : 65497830777
Status : Answered
Chosen Option : 1

Q.13 Which of the following is a famous Tamil epic composed by Ilango in ancient India?

- Ans 1. Shishupala Vadha
 2. Silappadikaram
 3. Aitareya Brahmana
 4. Ramacharitam

Question ID : 65497830798
Status : Not Answered
Chosen Option : --

Q.14 In October 2020, investment promotion and facilitation agency Guidance partnered with World Economic Forum (WEF) to establish India's first advanced manufacturing hub (AMHUB) in the state of _____.

- Ans 1. Tamil Nadu
 2. Karnataka
 3. Kerala
 4. Andhra Pradesh

Question ID : 65497830799
Status : Answered
Chosen Option : 1

Q.15 SLR determines the amount of money a bank needs to invest in certain specified securities, which are predominantly securities issued by the central and state governments. What is the full form of SLR?

- Ans 1. Statutory Liquidity Reserve
 2. Statutory Liquidity Ratio
 3. Statement Liquidity Ratio
 4. Statutory Liquidity Rate

Question ID : 65497830781
Status : Answered
Chosen Option : 4

Q.16 Which Indian player won the BBC Indian Sportswoman of the Year 2019?

- Ans 1. Manasi Joshi
 2. PV Sindhu
 3. Mary Kom
 4. Vinesh Phogat

Question ID : 65497830791
Status : Answered
Chosen Option : 2

Q.17 According to the Constitution of India, which of the following statements is correct?

- Ans 1. The Legislature is a small group of people.
 2. The Executive refers to our elected representatives.
 3. The Legislature, Executive and the Judiciary should exercise same powers.
 4. The Judiciary refers to the system of courts in the country.

Question ID : 65497830792
Status : Answered
Chosen Option : 4

Q.18 The Nobel Peace Prize 2020 was awarded to:

- Ans 1. International Monetary Fund
 2. Amnesty International
 3. World Food Programme
 4. World Health Organization

Question ID : 65497830780
Status : Answered
Chosen Option : 3

Q.19 A 'charkha' was placed at the centre of the tricolour flag of the Indian National Congress adopted in the year _____.

- Ans 1. 1929
 2. 1931
 3. 1938
 4. 1926

Question ID : 65497830795
Status : Answered
Chosen Option : 3

Q.20 What was India's rank in the Emerging Green Bond Market as per Economic Survey 2019-20?

- Ans 1. First
 2. Fourth
 3. Second
 4. Third

Question ID : 65497830796
Status : Answered
Chosen Option : 4

Q.21 Dashain is a famous festival which originated from _____.

- Ans 1. Myanmar
 2. India
 3. Nepal
 4. Bhutan

Question ID : 65497830788
Status : Answered
Chosen Option : 3

Q.22 Which of the following is India's highest (tallest) dam?

- Ans 1. Sardar Sarovar Dam, Gujarat
 2. Hirakud Dam, Odisha
 3. Tehri Dam, Uttarakhand
 4. Bhakra Nangal Dam, Himachal Pradesh

Question ID : 65497830782
Status : Answered
Chosen Option : 3

Q.23 How many fundamental rights and fundamental duties are prescribed in the Constitution of India?

- Ans
- 1. Seven and eleven, respectively
 - 2. Seven and ten, respectively
 - 3. Six and eleven, respectively
 - 4. Eight and ten, respectively

Question ID : 65497830786
Status : Answered
Chosen Option : 3

Q.24 In 1977, the Government of Bengal erected its first statue dedicated to a female freedom fighter in Kolkata Maidan. What was her name?

- Ans
- 1. Aruna Asaf Ali
 - 2. Matangini Hazra
 - 3. Kanaklata Barua
 - 4. Bh ka ji Cama

Question ID : 65497830784
Status : Answered
Chosen Option : 2

Q.25 In which year did India sign an agreement with International Seabed Authority for exploratory mining?

- Ans
- 1. 2000
 - 2. 2002
 - 3. 2003
 - 4. 2001

Question ID : 65497830789
Status : Not Answered
Chosen Option : --

Section : Part C Elementary Mathematics

Q.1 4 years ago, the average age of a family of 4 members was 19 years. A baby having been born, the average age of the family is the same today. Find the present age of the baby.

- Ans
- 1. 4 years
 - 2. 2 years
 - 3. 1 year
 - 4. 3 years

Question ID : 65497830814
Status : Answered
Chosen Option : 3

Q.2 The average of 9 numbers is 51. Average of three of them is 49 and average of four of the remaining numbers is 46. What is the average of the remaining numbers?

- Ans
- 1. 54
 - 2. 64
 - 3. 63
 - 4. 62.5

Question ID : 65497830803
Status : Answered
Chosen Option : 2

Q.3 The marked price of a bed sheet was ₹750. A man bought the bed sheet for ₹560 after getting two successive discounts of which the first was 16%. How much was the second discount?

- Ans
- 1. $11\frac{1}{2}\%$
 - 2. $11\frac{1}{9}\%$
 - 3. $11\frac{1}{4}\%$
 - 4. $11\frac{4}{3}\%$

Question ID : 65497830815
Status : Answered
Chosen Option : 2

Q.4 Find the value of $3 + \left\{1 + \frac{1}{3} - (3 - 4 \div 3) + \frac{1}{4} + \frac{2}{3}\right\}$.

- Ans
- 1. $\frac{7}{3}$
 - 2. $\frac{11}{12}$
 - 3. $\frac{43}{12}$
 - 4. $\frac{4}{3}$

Question ID : 65497830824
Status : Answered
Chosen Option : 3

Q.5 Kelvin and Kim can together finish a work in 25 days. They worked together for 15 days and then Kim left. After that, Kelvin finished the remaining work in 12 days. In how many days, can Kelvin alone finish the work?

- Ans
- 1. 39
 - 2. 34
 - 3. 36
 - 4. 30

Question ID : 65497830817
Status : Answered
Chosen Option : 4

Q.6 The price of an article increases by 10% every year. If the difference between its price at the end of the first year and third year is ₹69.30, then its price (in ₹) at the end of fourth year will be:

- Ans**
- 1. 363.00
 - 2. 441.93
 - 3. 399.30
 - 4. 439.23

Question ID : 65497830820
Status : Answered
Chosen Option : 4

Q.7 A tradesman marks his goods 20% above the cost price and allows his customers 10% reduction on their bills. What percentage profit does he make?

- Ans**
- 1. 7%
 - 2. 9%
 - 3. 5%
 - 4. 8%

Question ID : 65497830808
Status : Answered
Chosen Option : 4

Q.8 A vendor bought 25 dozen fruits for ₹3,750. Out of these, 50 fruits were rotten and therefore thrown away. At what rate per dozen (in ₹) should he sell the remaining to gain 20% in the entire transaction?

- Ans**
- 1. 216
 - 2. 180
 - 3. 192
 - 4. 204

Question ID : 65497830826
Status : Answered
Chosen Option : 1

Q.9 The HCF of 552, 759 and 828 is x . The value of x lies between:

- Ans**
- 1. 65 and 70
 - 2. 60 and 65
 - 3. 55 and 60
 - 4. 70 and 75

Question ID : 65497830819
Status : Answered
Chosen Option : 1

Q.10 The average attendance at a cricket stadium increased by 15% in 2012 in comparison to the previous year. If 2160 more people came to see the matches in 2012, how many came in 2011?

- Ans
- 1. 24000
 - 2. 14400
 - 3. 15000
 - 4. 32400

Question ID : 65497830816
Status : Answered
Chosen Option : 2

Q.11 A sum of ₹7,560 is divided between A, B and C such that if their shares are diminished by ₹400, ₹300 and ₹260, respectively, then their shares are in the ratio 4 : 2 : 5. What is the original share (in ₹) of C?

- Ans
- 1. 2,800
 - 2. 1,500
 - 3. 3,260
 - 4. 6,600

Question ID : 65497830806
Status : Answered
Chosen Option : 3

Q.12 The ratio of the present ages of A and B is 8 : 15. After four years from now, their ages will be in the ratio 9 : 16. What will be the sum of their ages (in years) after 8 years from now?

- Ans
- 1. 116
 - 2. 108
 - 3. 100
 - 4. 98

Question ID : 65497830821
Status : Answered
Chosen Option : 2

Q.13 A shopkeeper marks his goods at 20% above the cost price and gives two successive discounts of 5% and 10%. The gain percentage is:

- Ans
- 1. 2.3%
 - 2. 3%
 - 3. 1.8%
 - 4. 2.6%

Question ID : 65497830813
Status : Answered
Chosen Option : 4

Q.14 The area of a rectangular garden is 432 m^2 . The perimeter (in m) of the rectangular garden whose length is 6 m more than its width is:

- Ans**
- 1. 84
 - 2. 108
 - 3. 42
 - 4. 96

Question ID : 65497830807
Status : Answered
Chosen Option : 1

Q.15 If A bought an item for ₹384 and sold for ₹527, and B bought another item for ₹1,264 and sold for ₹1,724, whose gain percentage is more and by how much approximately?

- Ans**
- 1. A by 1.63%
 - 2. B by 1.54%
 - 3. A by 0.84%
 - 4. B by 0.65%

Question ID : 65497830811
Status : Answered
Chosen Option : 4

Q.16 Sheena owned 4 plants on which fresh flowers come every 2nd, 3rd, 4th and 6th day, respectively. If on Tuesday, fresh flowers came on all the four plants, then on which day will fresh flowers come on all the four plants at the earliest?

- Ans**
- 1. Tuesday
 - 2. Sunday
 - 3. Monday
 - 4. Thursday

Question ID : 65497830802
Status : Answered
Chosen Option : 2

Q.17 A can complete a task in 15 days and B can do it in 20 days. What is their one day work together?

- Ans**
- 1. $\frac{8}{15}$
 - 2. $\frac{7}{15}$
 - 3. $\frac{7}{60}$
 - 4. $\frac{9}{65}$

Question ID : 65497830812
Status : Answered
Chosen Option : 3

Q.18 अनिल ने Y शहर से X शहर के लिए 4.20 a.m. बजे प्रस्थान किया। उसने पहले 1 h 30 min तक 70 km/h की गति से यात्रा की। उसके बाद, गति को घटाकर 50 km/h कर दिया। यदि दोनों शहरों के बीच की दूरी 240 km थी, तो अनिल कितने बजे X शहर पहुंचा?

- Ans**
- 1. 7.25 a.m.
 - 2. 10.24 a.m.
 - 3. 8.32 a.m.
 - 4. 9.45 a.m.

Question ID : 65497830818
Status : Answered
Chosen Option : 3

Q.19 The diameter of the base of a right circular cone is 60 cm and its height is 16 cm. The curved surface area (in cm^2) of the cone is:

- Ans**
- 1. 960π
 - 2. 1020π
 - 3. 1054π
 - 4. 1088π

Question ID : 65497830823
Status : Answered
Chosen Option : 2

Q.20 $3 \times 6 + 8 - 6 \div 3 + 9$ is equal to:

- Ans**
- 1. 12
 - 2. 45
 - 3. 21
 - 4. 33

Question ID : 65497830810
Status : Answered
Chosen Option : 4

Q.21 A man travels from A to B at a speed of 20 km/h and returns by increasing his speed by 50%. What is his average speed for both the trips?

- Ans**
- 1. 40 km/h
 - 2. 48 km/h
 - 3. 24 km/h
 - 4. 36 km/h

Question ID : 65497830825
Status : Answered
Chosen Option : 3

Q.22 ₹16,000 धनराशि को 2 वर्ष के लिए 20% वार्षिक चक्रवृद्धि ब्याज दर पर उधार दिया जाता है। ब्याज यदि वार्षिक रूप में चक्रवृद्धि होने के बजाये अर्धवार्षिक रूप से चक्रवृद्धि होता, तो ब्याज के रूप में ₹x अधिक प्राप्त होते। x का मान कितना है?

- Ans
- 1. ₹378.20
 - 2. ₹365.40
 - 3. ₹372.80
 - 4. ₹385.60

Question ID : 65497830822
Status : Answered
Chosen Option : 4

Q.23 The monthly salaries of A, B and C are in the ratio 7 : 8 : 11. If the monthly salary of B is ₹3,600 less than that of C, then what is the annual salary (in ₹) of A?

- Ans
- 1. 8,40,000
 - 2. 1,00,800
 - 3. 6,30,000
 - 4. 3,15,000

Question ID : 65497830804
Status : Answered
Chosen Option : 1

Q.24 The simple interest on a certain sum of money for 2 years at 12% per annum is ₹60 less than the simple interest on the same sum for 3 years at 10% per annum. The sum (in ₹) is:

- Ans
- 1. ₹1,400
 - 2. ₹900
 - 3. ₹1,200
 - 4. ₹1,000

Question ID : 65497830809
Status : Answered
Chosen Option : 4

Q.25 If the compound interest on a certain sum for two years at 10% per annum compounded annually is ₹3,360, then what is the sum?

- Ans
- 1. ₹16,500
 - 2. ₹16,000
 - 3. ₹15,000
 - 4. ₹15,500

Question ID : 65497830805
Status : Answered
Chosen Option : 2

Q.1 Select the most appropriate meaning of the given idiom.

Maiden speech

- Ans 1. Unprepared speech
 2. First speech
 3. Last speech
 4. Madam's speech

Question ID : 65497830835
Status : Answered
Chosen Option : 2

Q.2 Select the most appropriate ANTONYM of the given word.

Dispute

- Ans 1. Trouble
 2. Confusion
 3. Doubt
 4. Agreement

Question ID : 65497830836
Status : Answered
Chosen Option : 4

Q.3 The following sentence has been divided into parts. One of them may contain an error. Select the part that contains the error from the given options. If you don't find any error, mark 'No error' as your answer.

By this time tomorrow / we will have / reached to Delhi.

- Ans 1. we will have
 2. No error
 3. By this time tomorrow
 4. reached to Delhi

Question ID : 65497830841
Status : Answered
Chosen Option : 1

Q.4 Select the most appropriate meaning of the given idiom.

A dime a dozen

- Ans 1. Something which can be bought only in dozens
 2. Something which is not expensive
 3. Something very common or of little value
 4. Something which costs a dime

Question ID : 65497830839
Status : Answered
Chosen Option : 3

Q.5 Select the most appropriate option to fill in the blank.

The situation became _____ after the scuffle between the farmers and the police.

- Ans 1. sad
 2. serious
 3. funny
 4. smooth

Question ID : 65497830829
Status : Answered
Chosen Option : 4

Q.6 Select the most appropriate ANTONYM of the given word.

INVERT

- Ans 1. Straighten
 2. Reverse
 3. Upset
 4. Lean

Question ID : 65497830842
Status : Answered
Chosen Option : 1

Q.7 Select the most appropriate option that can substitute the underlined segment in the given sentence. If there is no need to substitute it, select 'No substitution required'.

The farmer walked beside his bulls, isn't it?

- Ans 1. didn't he
 2. did he
 3. No substitution required
 4. didn't they

Question ID : 65497830827
Status : Answered
Chosen Option : 1

Q.8 Select the most appropriate synonym of the given word.

Recover

- Ans 1. Remain
 2. Regain
 3. Refrain
 4. Retain

Question ID : 65497830833
Status : Answered
Chosen Option : 2

Q.9 Select the most appropriate option to fill in the blank.

Mother's back was too _____ to work any longer, so she lay down to rest.

- Ans
- 1. sick
 - 2. sour
 - 3. sore
 - 4. soft

Question ID : 65497830846
Status : Answered
Chosen Option : 1

Q.10 Select the INCORRECTLY spelt word.

- Ans
- 1. Freeze
 - 2. Freind
 - 3. Frigid
 - 4. Fright

Question ID : 65497830828
Status : Answered
Chosen Option : 2

Q.11 Select the most appropriate option to fill in the blank.

War and Peace is a _____ written by Leo Tolstoy.

- Ans
- 1. celebrated
 - 2. notable
 - 3. distinguished
 - 4. masterpiece

Question ID : 65497830830
Status : Answered
Chosen Option : 3

Q.12 The following sentence has been split into four segments. Identify the segment that contains a grammatical error.

The children were / bubbling with excitement / at the thought of / seeing sea.

- Ans
- 1. bubbling with excitement
 - 2. The children were
 - 3. at the thought of
 - 4. seeing sea

Question ID : 65497830837
Status : Answered
Chosen Option : 4

Q.13 Select the most appropriate synonym of the given word.

Remedial

- Ans 1. Superficial
 2. Corrective
 3. Harmful
 4. Medicinal

Question ID : 65497830838
Status : Answered
Chosen Option : 2

Q.14 Select the option that can be used as a one-word substitute for the given group of words.

An area where fruit trees are grown

- Ans 1. Field
 2. Orchard
 3. Garden
 4. Farm

Question ID : 65497830831
Status : Answered
Chosen Option : 2

Q.15 Select the option that can be used as a one-word substitute for the given group of words.

A means of altering one's appearance to conceal one's identity

- Ans 1. Distort
 2. Disguise
 3. Drape
 4. Dress

Question ID : 65497830840
Status : Answered
Chosen Option : 2

Q.16 Select the most appropriate option that can substitute the underlined segment in the given sentence. If there is no need to substitute it, select 'No substitution required'.

If we are not clear about the exact meaning of a word, we should look into a dictionary.

- Ans 1. look on
 2. look to
 3. look of
 4. look up

Question ID : 65497830834
Status : Answered
Chosen Option : 1

Q.17 Select the **INCORRECTLY** spelt word.

- Ans 1. Assistance
 2. Exchanged
 3. Curious
 4. Participant

Question ID : 65497830844
Status : Answered
Chosen Option : 1

Q.18 Select the most appropriate option that can substitute the underlined segment in the given sentence. If there is no need to substitute it, select 'No substitution required'.

Please don't confuse me by giving so many different directions.

- Ans 1. by give so many
 2. No substitution required
 3. with giving so many
 4. by giving so much

Question ID : 65497830845
Status : Answered
Chosen Option : 1

Q.19 The following sentence has been split into four segments. Identify the segment that contains a grammatical error.

The penalty for / not wear masks / in public places / should be increased.

- Ans 1. The penalty for
 2. should be increased
 3. in public places
 4. not wear masks

Question ID : 65497830832
Status : Answered
Chosen Option : 4

Q.20 Select the option that can be used as a one-word substitute for the given group of words.

To reduce to a shorter form intended to stand for the whole

- Ans 1. Abbreviate
 2. Shrink
 3. Protract
 4. Extend

Question ID : 65497830843
Status : Answered
Chosen Option : 1

Comprehension:

In the following passage, some words have been deleted. Read the passage carefully and select the most appropriate option to fill in each blank.

Technology has made our lives simple and fast. The biggest (1)_____ has been the development of the internet. The internet is a (2)_____ of technology. It has brought us closer and people sitting at (3)_____ corners of the world can easily communicate. It facilitates shopping, money (4)_____, online learning etc. Cybercrimes are a result of the misuse of the internet. Children's (5)_____ to online games is another major problem faced by parents today.

SubQuestion No : 21

Q.21 Select the most appropriate option to fill in blank no. 1.

- Ans
- 1. supply
 - 2. value
 - 3. hindrance
 - 4. contribution

Question ID : 65497830848
Status : Answered
Chosen Option : 4

Comprehension:

In the following passage, some words have been deleted. Read the passage carefully and select the most appropriate option to fill in each blank.

Technology has made our lives simple and fast. The biggest (1)_____ has been the development of the internet. The internet is a (2)_____ of technology. It has brought us closer and people sitting at (3)_____ corners of the world can easily communicate. It facilitates shopping, money (4)_____, online learning etc. Cybercrimes are a result of the misuse of the internet. Children's (5)_____ to online games is another major problem faced by parents today.

SubQuestion No : 22

Q.22 Select the most appropriate option to fill in blank no. 2.

- Ans
- 1. favour
 - 2. asset
 - 3. boon
 - 4. burden

Question ID : 65497830849
Status : Answered
Chosen Option : 3

Comprehension:

In the following passage, some words have been deleted. Read the passage carefully and select the most appropriate option to fill in each blank.

Technology has made our lives simple and fast. The biggest (1)_____ has been the development of the internet. The internet is a (2)_____ of technology. It has brought us closer and people sitting at (3)_____ corners of the world can easily communicate. It facilitates shopping, money (4)_____, online learning etc. Cybercrimes are a result of the misuse of the internet. Children's (5)_____ to online games is another major problem faced by parents today.

SubQuestion No : 23

Q.23 Select the most appropriate option to fill in blank no. 3.

- Ans
- 1. distant
 - 2. farther
 - 3. further
 - 4. near

Question ID : 65497830850
Status : Answered
Chosen Option : 4

Comprehension:

In the following passage, some words have been deleted. Read the passage carefully and select the most appropriate option to fill in each blank.

Technology has made our lives simple and fast. The biggest (1)_____ has been the development of the internet. The internet is a (2)_____ of technology. It has brought us closer and people sitting at (3)_____ corners of the world can easily communicate. It facilitates shopping, money (4)_____, online learning etc. Cybercrimes are a result of the misuse of the internet. Children's (5)_____ to online games is another major problem faced by parents today.

SubQuestion No : 24

Q.24 Select the most appropriate option to fill in blank no. 4.

- Ans 1. transactions
 2. business
 3. contracts
 4. sites

Question ID : 65497830851
Status : Answered
Chosen Option : 1

Comprehension:

In the following passage, some words have been deleted. Read the passage carefully and select the most appropriate option to fill in each blank.

Technology has made our lives simple and fast. The biggest (1)_____ has been the development of the internet. The internet is a (2)_____ of technology. It has brought us closer and people sitting at (3)_____ corners of the world can easily communicate. It facilitates shopping, money (4)_____, online learning etc. Cybercrimes are a result of the misuse of the internet. Children's (5)_____ to online games is another major problem faced by parents today.

SubQuestion No : 25

Q.25 Select the most appropriate option to fill in blank no. 5.

- Ans 1. desire
 2. interest
 3. addiction
 4. indifference

Question ID : 65497830852
Status : Answered
Chosen Option : 3

Section : Part D Hindi

Q.1 'जो पढ़ने में रोचक लगे' वाक्यांश के लिए एक शब्द होगा-

- Ans 1. दर्शनीय
 2. गद्य
 3. पठनीय
 4. पद्य

Question ID : 65497830870
Status : Not Answered
Chosen Option : --

Q.2 निम्न मुहावरे का अर्थ व्यक्त करने वाले विकल्प का चयन कीजिए।

होश उड़ना

- Ans 1. डर जाना
 2. अयोग्य होना
 3. सपने देखना
 4. सफल होना

Question ID : 65497830864
Status : Not Answered
Chosen Option : --

Q.3 सही वर्तनी वाले शब्द का चयन कीजिए।

- Ans 1. परलौकिक
 2. पारलौकीक
 3. परलौकीक
 4. पारलौकिक

Question ID : 65497830853
Status : Not Answered
Chosen Option : --

Q.4 दिये गये वाक्यांश के लिए एक शब्द दीजिये।

किए हुए को मानने वाला

- Ans 1. अकृतज्ञ
 2. कृतकार्य
 3. कृतज्ञ
 4. कृतघ्न

Question ID : 65497830862
Status : Not Answered
Chosen Option : --

Q.5 रिक्त स्थान के लिए सबसे उपयुक्त शब्द का चयन करें।

भरत को कैकेयी की करनी पर _____ हुआ।

- Ans 1. क्रोध
 2. पश्चाताप
 3. भय
 4. क्षोभ

Question ID : 65497830866
Status : Not Answered
Chosen Option : --

Q.6 दिए गए वाक्य में रेखांकित खंड को प्रतिस्थापित करने के लिए सबसे उपयुक्त विकल्प का चयन करें। यदि इसे प्रतिस्थापित करने की आवश्यकता नहीं है, तो विकल्प 'किसी बदलाव की आवश्यकता नहीं है' का चयन करें।

भारत में मासिनराम में सर्वाधिक वर्षा होता है।

- Ans 1. सर्वाधिक वर्षा होती है।
 2. सर्वाधिक वर्षा हुए है।
 3. सर्वाधिक वर्षा हुई है।
 4. किसी बदलाव की आवश्यकता नहीं है।

Question ID : 65497830855
Status : Not Answered
Chosen Option : --

Q.7 दिए गए शब्द का विलोम चुनें।

आग्रह

- Ans 1. उपग्रह
 2. अनुग्रह
 3. दुराग्रह
 4. विग्रह

Question ID : 65497830861
Status : Not Answered
Chosen Option : --

Q.8 दिए गए वाक्य का वह भाग ज्ञात करें जिसमें कोई त्रुटि है। यदि कोई त्रुटि नहीं है, तो 'कोई त्रुटि नहीं है' चुनें।

कामायनी पढ़कर (1)/ आनन्द का (2)/ अनुभव होता है (3)/ कोई त्रुटि नहीं है (4)

- Ans 1. 4
 2. 1
 3. 3
 4. 2

Question ID : 65497830860
Status : Not Answered
Chosen Option : --

Q.9 रिक्त स्थान की पूर्ति के लिए सबसे उपयुक्त शब्द का चयन करें।

बच्चा, माँ-बाप की आँखों का _____ होता है।

- Ans 1. सितारा
 2. चाँद
 3. सूरज
 4. तारा

Question ID : 65497830856
Status : Not Answered
Chosen Option : --

Q.10 मुहावरे और उसके अर्थ युक्त सही युग्म की पहचान कीजिए-

- Ans 1. आँखों में धूल झोकना - धोखा देना
 2. अगूठा दिखाना - मुसीबत मोल लेना
 3. अगारे सिर पर धरना - शांति से रहना
 4. अम्बर के तारे गिनना - अच्छी नीद आना

Question ID : 65497830869

Status : Not Answered

Chosen Option : --

Q.11 दिए गए वाक्य का वह भाग ज्ञात करें जिसमें कोई त्रुटि है। यदि कोई त्रुटि नहीं है, तो 'कोई त्रुटि नहीं है' चुनें-

वृक्षों पर कोयल कूक रही है।

- Ans 1. वृक्षों पर
 2. कोई त्रुटि नहीं है।
 3. कोयल कूक
 4. रही है।

Question ID : 65497830858

Status : Not Answered

Chosen Option : --

Q.12 दिए गए वाक्य में रेखांकित खंड को प्रतिस्थापित करने के लिए सबसे उपयुक्त विकल्प का चयन करें। यदि इसे प्रतिस्थापित करने की आवश्यकता नहीं है, तो विकल्प 'किसी बदलाव की आवश्यकता नहीं है' का चयन करें।

मुझसे अब चल नहीं सकता।

- Ans 1. चल नहीं पाता
 2. चला नहीं जाता
 3. चल नहीं गया
 4. किसी बदलाव की आवश्यकता नहीं है।

Question ID : 65497830863

Status : Not Answered

Chosen Option : --

Q.13 दिये गये वाक्य में रेखांकित अश को प्रतिस्थापित करने के लिए सबसे उपयुक्त विकल्प का चयन करें।

तुम मुझे अपना छोटा सा भाई समझो।

- Ans 1. छोटे भाई
 2. छोटा भाई
 3. छोटा-मोटा भाई
 4. छोटे सा भाई

Question ID : 65497830865

Status : Not Answered

Chosen Option : --

Q.14 सही वर्तनी वाले शब्द का चयन कीजिए।

- Ans 1. प्रतीनिधी
 2. प्रतीनीधी
 3. प्रतिनिधि
 4. प्रतिनीधि

Question ID : 65497830854
Status : Not Answered
Chosen Option : --

Q.15 'परिचारक' का पर्यायवाची है-

- Ans 1. धावक
 2. वाहक
 3. चालक
 4. सेवक

Question ID : 65497830872
Status : Not Answered
Chosen Option : --

Q.16 दिये गये वाक्य के किस भाग में त्रुटि है?

उनके शासनकाल में दगे हुए।

- Ans 1. शासनकाल
 2. हुए।
 3. में दगे
 4. उनके

Question ID : 65497830871
Status : Not Answered
Chosen Option : --

Q.17 दिये गये वाक्यांश के लिए एक शब्द दीजिये।

जिसे बुलाया गया हो

- Ans 1. अनाहूत
 2. अनेर
 3. आहूत
 4. अनिमेष

Question ID : 65497830857
Status : Not Answered
Chosen Option : --

Q.18 दिए गए शब्द के समानार्थी शब्द का चयन करें।

उजास

- Ans 1. प्रयास
 2. उन्नति
 3. चमक
 4. उत्तमता

Question ID : 65497830859
Status : Not Answered
Chosen Option : --

Q.19 रिक्त स्थान की पूर्ति के लिए सबसे उपयुक्त विकल्प का चयन करें।

इस मशीन में कुछ _____ है।

- Ans
- 1. खटपट
 - 2. बड़बड़
 - 3. गड़बड़
 - 4. झकझक

Question ID : 65497830867
Status : Not Answered
Chosen Option : --

Q.20 अमावस्या को अधेरा छा जाता है।

रेखांकित शब्द का विलोम बताइए-

- Ans
- 1. अधकार
 - 2. अधेरा
 - 3. पूर्णिमा
 - 4. अमास

Question ID : 65497830868
Status : Not Answered
Chosen Option : --

Comprehension:

दिए गए गद्यांश में से कुछ शब्द हटा दिए गए हैं। संबंधित प्रश्नों में प्रत्येक सख्या के लिए सबसे उपयुक्त विकल्प का चयन कीजिए।

आचार्य महावीरप्रसाद द्विवेदी ने हिन्दी निबन्ध के स्वरूप और (1) _____ का (2) _____ किया। भाषा की (3) _____ पर बल देने के कारण इस (4) _____ के निबन्ध प्रौढ़, व्यवस्थित और गम्भीर हैं। इनमें विषयो की विविधता और विचारों की (5) _____ मिलती है।

SubQuestion No : 21

Q.21 गद्यांश के रिक्त स्थान (1) के लिए सर्वाधिक उपयुक्त शब्द होगा-

- Ans
- 1. दिशा
 - 2. रूप
 - 3. स्वर
 - 4. दशा

Question ID : 65497830874
Status : Not Answered
Chosen Option : --

Comprehension:

दिए गए गद्यांश में से कुछ शब्द हटा दिए गए हैं। सबंधित प्रश्नों में प्रत्येक सख्या के लिए सबसे उपयुक्त विकल्प का चयन कीजिए।

आचार्य महावीरप्रसाद द्विवेदी ने हिन्दी निबन्ध के स्वरूप और (1) _____ का (2) _____ किया। भाषा की (3) _____ पर बल देने के कारण इस (4) _____ के निबन्ध प्रौढ़, व्यवस्थित और गम्भीर हैं। इनमें विषयो की विविधता और विचारों की (5) _____ मिलती है।

SubQuestion No : 22

Q.22 गद्यांश के रिक्त स्थान (2) के लिए सर्वाधिक उपयुक्त शब्द होगा-

- Ans
- 1. सयोजन
 - 2. निर्धारण
 - 3. सस्थापन
 - 4. निश्चितिकरण

Question ID : 65497830875

Status : Not Answered

Chosen Option : --

Comprehension:

दिए गए गद्यांश में से कुछ शब्द हटा दिए गए हैं। सबंधित प्रश्नों में प्रत्येक सख्या के लिए सबसे उपयुक्त विकल्प का चयन कीजिए।

आचार्य महावीरप्रसाद द्विवेदी ने हिन्दी निबन्ध के स्वरूप और (1) _____ का (2) _____ किया। भाषा की (3) _____ पर बल देने के कारण इस (4) _____ के निबन्ध प्रौढ़, व्यवस्थित और गम्भीर हैं। इनमें विषयो की विविधता और विचारों की (5) _____ मिलती है।

SubQuestion No : 23

Q.23 गद्यांश के रिक्त स्थान (3) के लिए सर्वाधिक उपयुक्त शब्द होगा-

- Ans
- 1. शुद्धता
 - 2. सुकुमारता
 - 3. प्रौढ़ता
 - 4. कोमलता

Question ID : 65497830876

Status : Not Answered

Chosen Option : --

Comprehension:

दिए गए गद्यांश में से कुछ शब्द हटा दिए गए हैं। सबंधित प्रश्नों में प्रत्येक सख्या के लिए सबसे उपयुक्त विकल्प का चयन कीजिए।

आचार्य महावीरप्रसाद द्विवेदी ने हिन्दी निबन्ध के स्वरूप और (1) _____ का (2) _____ किया। भाषा की (3) _____ पर बल देने के कारण इस (4) _____ के निबन्ध प्रौढ़, व्यवस्थित और गम्भीर हैं। इनमें विषयो की विविधता और विचारों की (5) _____ मिलती है।

SubQuestion No : 24

Q.24 गद्यांश के रिक्त स्थान (4) के लिए सर्वाधिक उपयुक्त शब्द होगा-

- Ans
- 1. युग
 - 2. समय
 - 3. साल
 - 4. पल

Question ID : 65497830877

Status : Not Answered

Chosen Option : --

Comprehension:

दिए गए गद्यांश में से कुछ शब्द हटा दिए गए हैं। सबंधित प्रश्नों में प्रत्येक सख्या के लिए सबसे उपयुक्त विकल्प का चयन कीजिए।

आचार्य महावीरप्रसाद द्विवेदी ने हिन्दी निबन्ध के स्वरूप और (1) _____ का (2) _____ किया। भाषा की (3) _____ पर बल देने के कारण इस (4) _____ के निबन्ध प्रौढ़, व्यवस्थित और गम्भीर हैं। इनमें विषयो की विविधता और विचारों की (5) _____ मिलती है।

SubQuestion No : 25

Q.25 गद्यांश के रिक्त स्थान (5) के लिए सर्वाधिक उपयुक्त शब्द होगा-

- Ans**
- 1. गहराई
 - 2. गहनता
 - 3. महानता
 - 4. भिन्नता

Question ID : **65497830878**

Status : **Not Answered**

Chosen Option : --

**SSC
GD**

Previous Year Paper
15 Dec 2021 Shift 2
English

Exam Date	15/12/2021
Exam Time :	12:30 PM - 2:00 PM
Subject	Constable GD 2021

Section : Part A General Intelligence and Reasoning

Q.1 Select the option that is related to the fourth number in the same way as the first number is related to the second number and the fifth number is related to the sixth number.

26 : 6 :: ? : 11 :: 37 : 7

- Ans 1. 101
 2. 122
 3. 82
 4. 145

Question ID : 65497834312
Status : Answered
Chosen Option : 1

Q.2 Eight girls, K, L, M, N, O, P, Q and R, are sitting in two lines, with four girls in each line. Both the lines are facing the same direction. One line is behind the other line. K is at a corner and to the immediate left of P. O is to the immediate left of M. Two persons are sitting between K and R. L is just behind P. O is between L and M. N is not in the front line. Who is sitting between P and R?

- Ans 1. Q
 2. M
 3. L
 4. N

Question ID : 65497834311
Status : Answered
Chosen Option : 1

Q.3 Select the correct option that indicates the arrangement of the given words in the order in which they appear in an English dictionary.

1. Patent
2. Patient
3. Patience
4. Paternalism
5. Patella

- Ans 1. 1, 4, 2, 3, 5
 2. 5, 4, 1, 3, 2
 3. 5, 1, 4, 3, 2
 4. 5, 1, 2, 3, 4

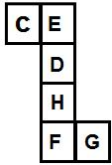
Question ID : 65497834317
Status : Answered
Chosen Option : 3

Q.4 Four letter-clusters have been given, out of which three are alike in some manner and one is different. Select the letter-cluster that is different.

- Ans 1. DSE
 2. MMV
 3. LPU
 4. AMU

Question ID : 65497834329
Status : Answered
Chosen Option : 2

Q.5 A cube is made by folding the given sheet. In the cube so formed, which pair of letters will be on the opposite faces?



- Ans 1. E and D
 2. E and H
 3. C and F
 4. C and H

Question ID : 65497834314
Status : Answered
Chosen Option : 2

Q.6 Six friends, A, B, C, D, E and F, are sitting around a circular table facing the centre. D is third to the right of B. F is to the immediate right of D. C is between D and E. Who is sitting between B and F?

- Ans 1. C
 2. E
 3. D
 4. A

Question ID : 65497834310
Status : Answered
Chosen Option : 4

Q.7 Select the combination of letters that when sequentially placed in the blanks of the given series will complete the series.

K U _ _ N K _ Q P _ _ U _ P N

- Ans 1. QPUNKQ
 2. QPUNQK
 3. QQPUNK
 4. QUPQNK

Question ID : 65497834318
Status : Answered
Chosen Option : 1

Q.8 Study the given pattern carefully and select the number that can replace the question mark (?) in it.

26 19 12
32 ? 16
23 20 17

- Ans 1. 24
 2. 15
 3. 32
 4. 28

Question ID : 65497834323
Status : Answered
Chosen Option : 1

Q.9 When twice of a number added to 3 is multiplied by 5 and added to the number itself, it gives 158. What is the square of that number?

- Ans 1. 225
 2. 289
 3. 169
 4. 121

Question ID : 65497834324
Status : Answered
Chosen Option : 3

Q.10 Select the option that is embedded in the given figure (rotation is NOT allowed).



- Ans 1.
- 2.
- 3.
- 4.

Question ID : 65497834315
Status : Answered
Chosen Option : 4

Q.11 Select the letter-cluster from among the given options that can replace the question mark (?) in the following series.

NKY, LHU, JEQ, ?, FYI

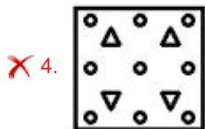
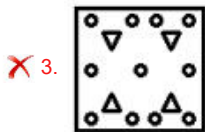
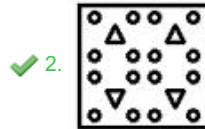
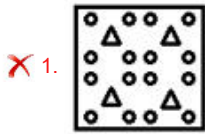
- Ans 1. HBM
 2. HCN
 3. GAO
 4. IBN

Question ID : 65497834308
Status : Answered
Chosen Option : 1

Q.12 The sequence of folding a piece of paper and the manner in which the folded paper has been cut is shown in the following figures. How would this paper look when unfolded?



Ans



Question ID : 65497834325

Status : Answered

Chosen Option : 2

Q.13 In a certain code language, 'GLARE' is written as '201526922', 'DUST' is written as '23687'. How will 'HYPER' be written in that language?

Ans ✗ 1. 19221219

✓ 2. 19211229

✗ 3. 19121229

✗ 4. 19122129

Question ID : 65497834330

Status : Answered

Chosen Option : 2

Q.14 Select the number from among the given options that can replace the question mark (?) in the following series.

7, 16, 41, ?, 171, 292

Ans ✗ 1. 100

✗ 2. 97

✓ 3. 90

✗ 4. 81

Question ID : 65497834331





Status : Answered

Chosen Option : 3

Q.15 Select the Venn diagram that best represents the relationship between the following classes.

Mothers, Daughters, Females

Ans

1. 
2. 
3. 
4. 

Question ID : 65497834316
Status : Answered
Chosen Option : 2

Q.16 In a certain code language, LOTUS is written as NMVSU. How will TULIP be written in that language?

- Ans 1. UVMJQ
2. VSNGR
3. UTMHQ
4. VWNKR

Question ID : 65497834321
Status : Answered
Chosen Option : 2

Q.17 'Medicines' is related to 'Pharmacy' in the same way as 'Historical objects' is related to _____.

- Ans 1. Culture
2. Industry
3. Museum
4. Architecture

Question ID : 65497834309
Status : Answered
Chosen Option : 3

Q.18 Read the given statements and conclusions carefully. Assuming that the information given in the statements is true, even if it appears to be at variance with commonly known facts, decide which of the given conclusions logically follow(s) from the statements.

Statements:

Some roses are pansies.

Some lilies are pansies.

All roses are daisies.

Conclusions:

I. Some roses are lilies.

II. All pansies are daisies.

- Ans**
- 1. Both conclusions I and II follow
 - 2. Only conclusion I follows
 - 3. Only conclusion II follows
 - 4. Neither conclusion I nor II follows

Question ID : 65497834322

Status : Answered

Chosen Option : 4

Q.19 In a certain code language, 'TONIC' is written as 'UPOJDB', and 'PRINT' is written as 'QSJOUS'. How will 'SUPER' be written in that language?

- Ans**
- 1. TVQFST
 - 2. TVFQSQ
 - 3. TUQSQF
 - 4. TVQFSQ

Question ID : 65497834327

Status : Answered

Chosen Option : 4

Q.20 Which two numbers should be interchanged to make the given equation correct?

$$45 + 35 \times 7 - 81 \div 9 = 321$$

- Ans**
- 1. 45 and 35
 - 2. 45 and 7
 - 3. 7 and 9
 - 4. 45 and 81

Question ID : 65497834313

Status : Answered

Chosen Option : 4

Q.21 Select the figure from among the given options that can replace the question mark (?) in the following series.



Ans

✗ 1.



✗ 2.



✗ 3.



✓ 4.



Question ID : 65497834320
Status : Answered
Chosen Option : 4

Q.22 Pointing to a photograph of a boy, Aditya said, "He is the only son of my mother-in-law's only daughter." How is the boy related to Aditya?

Ans

✗ 1. Nephew

✗ 2. Brother-in-law

✓ 3. Son

✗ 4. Father-in-law

Question ID : 65497834328
Status : Answered
Chosen Option : 3

Q.23 Select the number from among the given options that can replace the question mark (?) in the following series.

11, 33, 13, 39, 17, ?

Ans

✓ 1. 51

✗ 2. 41

✗ 3. 57

✗ 4. 19

Question ID : 65497834319
Status : Answered
Chosen Option : 1

Q.24 Select the correct mirror image of the given combination when the mirror is placed at 'PQ'.

NUMERICAL
P
|
Q

- Ans
- ✓ 1. NUMERICAL
 - ✗ 2. IANIRECAL
 - ✗ 3. IANIRECAL
 - ✗ 4. IANIRECAL

Question ID : 65497834332
Status : Answered
Chosen Option : 1

Q.25 Select the option that is related to the third letter-cluster in the same way as the second letter-cluster is related to the first letter-cluster.

BGL : HNT :: EIM : ?

- Ans
- ✗ 1. ILN
 - ✗ 2. JLP
 - ✓ 3. KPU
 - ✗ 4. QTX

Question ID : 65497834326
Status : Answered
Chosen Option : 3

Section : Part B General Knowledge and General Awareness

Q.1 Aurangzeb had depleted the military and financial resources of his empire by fighting a long war in _____.

- Ans
- ✗ 1. Hyderabad
 - ✗ 2. Awadh
 - ✗ 3. Bengal
 - ✓ 4. the Deccan

Question ID : 65497834350
Status : Not Answered
Chosen Option : --

Q.2 Project Snow Leopard was launched in India in _____.

- Ans
- ✗ 1. 2014
 - ✗ 2. 2012
 - ✓ 3. 2009
 - ✗ 4. 2006

Question ID : 65497834341
Status : Not Answered
Chosen Option : --

Q.3 Which among the following states does NOT come under the catchment area of River Yamuna?

- Ans 1. Punjab
 2. Uttarakhand
 3. Himachal Pradesh
 4. Rajasthan

Question ID : 65497834344
Status : Not Answered
Chosen Option : --

Q.4 Heptathlete Swapna Barman hails from the state of _____.

- Ans 1. Mizoram
 2. Odisha
 3. Nagaland
 4. West Bengal

Question ID : 65497834356
Status : Not Answered
Chosen Option : --

Q.5 How many Indian beaches were awarded the prestigious 'Blue Flag certification' by an international jury in October 2020?

- Ans 1. Six
 2. Five
 3. Eight
 4. Seven

Question ID : 65497834340
Status : Not Answered
Chosen Option : --

Q.6 On 1st December 2020, which of the following states launched the scheme 'Orunodoi'?

- Ans 1. Himachal Pradesh
 2. Sikkim
 3. Assam
 4. West Bengal

Question ID : 65497834343
Status : Answered
Chosen Option : 4

Q.7 Which of the following is a primary constituent of pearl?

- Ans 1. Calcium carbonate
 2. Calcium sulfate
 3. Sodium bicarbonate
 4. Magnesium Peroxide

Question ID : 65497834337
Status : Answered
Chosen Option : 1

Q.8 The Hazarduari Palace is located in _____.

- Ans 1. Bikaner
 2. Murshidabad
 3. Mysuru
 4. Jodhpur

Question ID : 65497834353
Status : Not Answered
Chosen Option : --

Q.9 Which of the following newspapers was started by Raja Ram Mohan Roy?

- Ans 1. Amrita Bazar Patrika
 2. Karmayogin
 3. Ananda Bazar Patr ka
 4. Sambad Kaumudi

Question ID : 65497834342
Status : Not Answered
Chosen Option : --

Q.10 Which among the following was the first state in the country to fix floor prices of vegetables, with effect from 1 November 2020?

- Ans 1. Kerala
 2. Odisha
 3. Tamil Nadu
 4. Telangana

Question ID : 65497834352
Status : Not Answered
Chosen Option : --

Q.11 _____ near Allahabad had a sophisticated water harvesting system that channelled the flood water of the river Ganga, even in ancient times.

- Ans 1. Lahuradewa
 2. Kaushambi (Kosambi)
 3. Sringaverapura
 4. Jhusi (Jhansi)

Question ID : 65497834354
Status : Not Answered
Chosen Option : --

Q.12 The play 'Abhijnana Shakuntalam' by Kalidasa is a love story between Shakuntala and King _____.

- Ans 1. Dushasana
 2. Dasharatha
 3. Dhritarashtra
 4. Dushyanta

Question ID : 65497834355
Status : Answered
Chosen Option : 4

Q.13 Sorters in the Wool industry sometimes get infected by a bacterium called _____, which causes a fatal blood disease called 'Sorter's Disease'.

Ans 1. acetobacter pasteurianus

2. anthrax

3. edwardsiella

4. melittangium boletus

Question ID : 65497834336

Status : Answered

Chosen Option : 4

Q.14 Article 368 of the Constitution of India is related to:

Ans 1. agricultural procedures

2. parliament

3. centre state relations

4. constitutional amendment

Question ID : 65497834351

Status : Answered

Chosen Option : 4

Q.15 In which year will India host the Women's Asian Cup in football?

Ans 1. 2021

2. 2024

3. 2023

4. 2022

Question ID : 65497834348

Status : Answered

Chosen Option : 3

Q.16 The centre of the white portion of the National Flag of India is adorned by a navy-blue Ashoka Chakra, a wheel with _____ spokes.

Ans 1. 22

2. 24

3. 20

4. 30

Question ID : 65497834335

Status : Answered

Chosen Option : 2

Q.17 Which of the following programmes was launched during Union Budget 2020-21 for the nutrition of children and pregnant women?

Ans 1. Poshan Sang

2. Poshan Gyan

3. Poshan Abhiyaan

4. Poshan Adhikar

Question ID : 65497834345

Status : Answered

Chosen Option : 4

Q.18 The expected returns to farmers over their cost of production are estimated to be highest in case of _____ at 85% as compared to other mandated Kharif crops for marketing season 2021-22 (as announced by the Cabinet Committee on Economic Affairs in June 2021).

- Ans 1. Bajra
 2. Tur (Arhar)
 3. Moong
 4. Urad

Question ID : 65497834357
Status : Not Answered
Chosen Option : --

Q.19 Who among the following is the author of the book 'The Third Pillar: How Markets and The State Leave the Community Behind'?

- Ans 1. Raghuram Rajan
 2. Ruchir Sharma
 3. Jairam Ramesh
 4. P Chidambaram

Question ID : 65497834338
Status : Not Answered
Chosen Option : --

Q.20 The Khalji and Tughluq rulers had appointed military commanders as governors of territories. These lands were called:

- Ans 1. samanta
 2. muqti
 3. iqtadar
 4. iqta

Question ID : 65497834349
Status : Answered
Chosen Option : 4

Q.21 Who among the following was elected as the first President of Hockey India from north-east India in November 2020?

- Ans 1. Gyanendro Ningombam
 2. Chinglensana Singh
 3. Kothajit Singh
 4. Mohd Mushtaque Ahmad

Question ID : 65497834334
Status : Answered
Chosen Option : 1

Q.22 Tea and Coffee are grown in _____ soil.

- Ans 1. laterite
 2. alluvial
 3. black
 4. arid

Question ID : 65497834347
Status : Answered
Chosen Option : 1

Q.23 As per the Economic Survey of India 2020-2021, which state is NOT showing gain in its forest cover?

- Ans
- 1. Karnataka
 - 2. Andhra Pradesh
 - 3. Arunachal Pradesh
 - 4. Kerala

Question ID : 65497834333
Status : Answered
Chosen Option : 2

Q.24 Krishnadevaraya, who reigned over Vijayanagar from 1509 to 1529, belonged to the:

- Ans
- 1. Saluva dynasty
 - 2. Tuluva dynasty
 - 3. Sangama dynasty
 - 4. Aravidu dynasty

Question ID : 65497834346
Status : Answered
Chosen Option : 3

Q.25 Which Article of the Constitution of India provides Fundamental Duties?

- Ans
- 1. Article 18
 - 2. Article 81
 - 3. Article 51A
 - 4. Article 21A

Question ID : 65497834339
Status : Answered
Chosen Option : 3

Section : Part C Elementary Mathematics

Q.1 The cost price of 21 articles is equal to the selling price of 15 articles. Find the gain or loss percentage.

- Ans
- 1. 23% loss
 - 2. $22\frac{1}{7}\%$ gain
 - 3. 15% loss
 - 4. 40% gain

Question ID : 65497834376
Status : Answered
Chosen Option : 4

Q.2 What is the sum of the digits of the least number which when divided by 12, 16 and 20 leaves the same remainder 6 in each case and it is divisible by 9?

- Ans
- 1. 14
 - 2. 18
 - 3. 12
 - 4. 16

Question ID : 65497834360
Status : Answered
Chosen Option : 2

Q.3 A shopkeeper bought an item for ₹4,500 and sold it at a loss of 5%. From this money, he bought another item and sold it at a profit of 10%. What is his overall profit?

- Ans**
- 1. ₹280.50
 - 2. ₹202.50
 - 3. ₹210
 - 4. ₹220

Question ID : 65497834378
Status : Answered
Chosen Option : 2

Q.4 Find the value of $5 \times [6 \times 2\{3 \times 7 \div (5 \times 3)\}]$.

- Ans**
- 1. 126
 - 2. 84
 - 3. 104
 - 4. 92

Question ID : 65497834375
Status : Answered
Chosen Option : 2

Q.5 If the simple interest charged for 9 months be 0.12 times the money borrowed, what is the rate percent per year?

- Ans**
- 1. 15%
 - 2. 18%
 - 3. 16%
 - 4. 12%

Question ID : 65497834366
Status : Answered
Chosen Option : 3

Q.6 If the ratio of three numbers A, B and C is 2 : 3 : 5, and the sum of the squares of these numbers is 3800, then the value of C is:

- Ans**
- 1. 30
 - 2. 40
 - 3. 50
 - 4. 20

Question ID : 65497834371
Status : Answered
Chosen Option : 3

Q.7 If diagonal of a cube is $\sqrt{108}$ cm, then the volume (in cm^3) of the cube is:

- Ans**
- 1. 214
 - 2. 216
 - 3. 228
 - 4. 226

Question ID : 65497834372
Status : Answered
Chosen Option : 2

Q.8 The average speed of a train is 180% of the average speed of a car. The car covers a distance of 990 km in 15 hours. The time taken (in hours) by the train to cover the distance of 891 km is:

Ans

1. $9\frac{1}{2}$

2. $7\frac{1}{2}$

3. $6\frac{1}{2}$

4. $5\frac{1}{2}$

Question ID : 65497834370

Status : Answered

Chosen Option : 2

Q.9 A dealer allows his customers a discount of 20% and still gains 20%. If the cost price of an article is ₹960, what is its marked price (in ₹)?

Ans

1. 1,280

2. 1,152

3. 1,440

4. 1,600

Question ID : 65497834363

Status : Answered

Chosen Option : 3

Q.10 When 'x' is subtracted from each of the numbers 22, 39, 56 and 107, then the resulting numbers, in this order, are in proportion. What is the mean proportional between $(x + 3)$ and $(3x - 7)$?

Ans

1. 8

2. 12

3. 14

4. 10

Question ID : 65497834380

Status : Answered

Chosen Option : 1

Q.11 In a cricket test match, Anuj completed his double century with 15 sixes and 18 fours. What percentage of runs did he make by running between the wickets to complete the double century?

Ans

1. 19%

2. 22%

3. 24.5%

4. 16.5%

Question ID : 65497834364

Status : Answered

Chosen Option : 1

Q.12 If two numbers are 12% and 48% of a third number, what percentage is the first number of the second number?

- Ans**
- 1. 30%
 - 2. 20%
 - 3. 25%
 - 4. 15%

Question ID : 65497834374

Status : Answered

Chosen Option : 3

Q.13 A machine can complete double the work that a man can complete in a given period of time. To complete a work, 10 machines and 5 men take 60 days. If there were 10 men and 5 machines, then the time it would have taken to complete the work is:

- Ans**
- 1. 90 days
 - 2. 84 days
 - 3. 68 days
 - 4. 75 days

Question ID : 65497834377

Status : Answered

Chosen Option : 4

Q.14 4 men and 4 women can complete a work in 5 days, while 2 men and 5 women can finish it in 6 days. How much time (in days) will be taken by 1 woman working alone and 1 man working all by himself to complete the work, respectively?

- Ans**
- 1. 20 and 36
 - 2. 45 and 36
 - 3. 36 and 45
 - 4. 36 and 20

Question ID : 65497834367

Status : Answered

Chosen Option : 2

Q.15 ₹9,500 is divided among three friends A, B and C such that B gets 75% of the amount that A gets and the ratio between A and C's shares is 8 : 5. The amount (in ₹) that B gets is:

- Ans**
- 1. 4,000
 - 2. 3,000
 - 3. 6,000
 - 4. 2,500

Question ID : 65497834365

Status : Answered

Chosen Option : 2

Q.16 The radius of the base of a solid right circular cylinder is 10.5 cm and its volume is 5197.5 cm^3 . What is the total surface area (in cm^2) of the cylinder? (Take $\pi = \frac{22}{7}$)

- Ans**
- 1. 1584
 - 2. 1683
 - 3. 1605
 - 4. 1749

Question ID : **65497834382**
Status : **Answered**
Chosen Option : **2**

Q.17 The average weight of the students in a class is 56 kg. If five more students whose average weight is 58 kg, join the class, the average weight of the students increases by 0.5 kg. What was the original number of students in the class?

- Ans**
- 1. 18
 - 2. 20
 - 3. 25
 - 4. 15

Question ID : **65497834361**
Status : **Answered**
Chosen Option : **4**

Q.18 The LCM and HCF of two numbers are 1920 and 4, respectively. One of the numbers is 60. Find the other number.

- Ans**
- 1. 128
 - 2. 124
 - 3. 88
 - 4. 120

Question ID : **65497834373**
Status : **Answered**
Chosen Option : **1**

Q.19 The average age of 10 members of a family is 29 years. If the youngest members are twins and each is 5 years old, what was the average age (in years) of the family members at the time of birth of the twins?

- Ans**
- 1. 28
 - 2. 30
 - 3. 31
 - 4. 32

Question ID : **65497834362**
Status : **Answered**
Chosen Option : **1**

Q.20 A train, 250 m long, passes a railway platform 200 m long, in 45 s with a uniform speed. What is the time (in seconds) taken by the train to pass a man cycling in the direction of the train at a speed of 6 km/h?

- Ans**
- 1. 30
 - 2. 62.5
 - 3. 21
 - 4. 54

Question ID : **65497834368**
Status : **Answered**

Q.21

The expression $\frac{5\frac{5}{8}}{6\frac{7}{8}}$ of $\frac{6\frac{7}{11}}{9\frac{1}{8}} \div \frac{8}{9} \left(2\frac{3}{11} + \frac{13}{22} \right)$ of $\frac{9}{5}$ equals to:

Ans

- 1. $\frac{11}{36}$
- 2. $\frac{5}{36}$
- 3. $\frac{1}{36}$
- 4. $\frac{25}{36}$

Question ID : 65497834369

Status : Answered

Chosen Option : 2

Q.22 By selling an item for ₹3,750 a shopkeeper earned 25% profit. If the item had been sold for ₹300 more, then what would have been the profit percentage of the shopkeeper?

Ans

- 1. 32
- 2. 37.5
- 3. 35
- 4. 36

Question ID : 65497834358

Status : Answered

Chosen Option : 3

Q.23 A shopkeeper marks his goods 40% above their cost price. He sells 60% of the goods at the marked price and the remaining at 65% discount on the marked price. His gain/loss in the whole transaction is:

Ans

- 1. gain, 3.6%
- 2. gain, 9.6%
- 3. loss, 3.6%
- 4. loss, 9.6%

Question ID : 65497834379

Status : Answered

Chosen Option : 1

Q.24 A sum of ₹10,000 amounts to ₹13,225 in 2 years at a certain rate per cent per annum, when the interest is compounded annually. What will be the interest (in ₹) on the same sum for the same time at the same rate, when the interest is compounded 8-monthly?

Ans

- 1. 3,350
- 2. 3,360
- 3. 3,310
- 4. 3,290

Question ID : 65497834381

Status : Answered

Chosen Option : 3

Q.25 A sum of money lent at simple interest amounts to ₹7,920 in 2 years and to ₹11,220 after 5 more years. What is the rate of interest per annum?

- Ans**
- 1. 10%
 - 2. 9.85%
 - 3. 12%
 - 4. 17.5%

Question ID : 65497834359
Status : Answered
Chosen Option : 1

Section : Part D English

Q.1 Select the most appropriate synonym of the given word.

SUSTAIN (V)

- Ans**
- 1. Believe
 - 2. Weaken
 - 3. Suspect
 - 4. Support

Question ID : 65497834401
Status : Answered
Chosen Option : 4

Q.2 Select the most appropriate option to fill in the blank.

Disasters expose the most _____ section of society to grave danger.

- Ans**
- 1. equitable
 - 2. sustainable
 - 3. vulnerable
 - 4. potable

Question ID : 65497834387
Status : Answered
Chosen Option : 3

Q.3 Select the most appropriate ANTONYM of the given word.

Just

- Ans**
- 1. Blur
 - 2. Fail
 - 3. Conclude
 - 4. Corrupt

Question ID : 65497834385
Status : Answered
Chosen Option : 4

Q.4 Select the option that can be used as a one-word substitute for the given group of words.

Sound made by a horse

- Ans
- 1. Bray
 - 2. Bark
 - 3. Growl
 - 4. Neigh

Question ID : 65497834384
Status : Answered
Chosen Option : 4

Q.5 The following sentence has been split into four segments. Identify the segment that contains a grammatical error.

Its matter of great concern / for the authorities that / despite all the efforts, / the number of patients is increasing.

- Ans
- 1. the number of patients is increasing
 - 2. despite all the efforts
 - 3. for the authorities that
 - 4. Its matter of great concern

Question ID : 65497834388
Status : Answered
Chosen Option : 4

Q.6 Select the correctly spelt word.

- Ans
- 1. Mathematiks
 - 2. Mathematics
 - 3. Mathemetics
 - 4. Maethematics

Question ID : 65497834386
Status : Answered
Chosen Option : 2

Q.7 Select the most appropriate ANTONYM of the given word.

Delicious

- Ans
- 1. Satisfactory
 - 2. Sweet
 - 3. Distasteful
 - 4. Tasteful

Question ID : 65497834389
Status : Answered
Chosen Option : 3

Q.8 Select the most appropriate option that can substitute the underlined word in the given sentence. If there is no need to substitute it, select 'No substitution required'.

Despite play very well, we lost the match.

- Ans
- 1. No substitution required
 - 2. Despite of our playing
 - 3. Despite playing
 - 4. Despite of us playing

Question ID : 65497834397
Status : Answered
Chosen Option : 3

Q.9 Select the option that can be used as a one-word substitute for the given group of words.

Person who is the natural successor to ancestral property

- Ans
- 1. Extrovert
 - 2. Heretic
 - 3. Interlocutor
 - 4. Heir

Question ID : 65497834390
Status : Answered
Chosen Option : 4

Q.10 Select the most appropriate option to fill in the blank.

The ticket gives _____ travel on city buses for as little as ₹100.

- Ans
- 1. never-ending
 - 2. uncontrolled
 - 3. infinite
 - 4. unlimited

Question ID : 65497834398
Status : Answered
Chosen Option : 1

Q.11 The following sentence has been divided into parts. One of them may contain an error. Select the part that contains the error from the given options. If you don't find any error, mark 'No error' as your answer.

Did you knew / that there will be / a pay hike soon?

- Ans
- 1. a pay hike soon
 - 2. No error
 - 3. that there will be
 - 4. Did you knew

Question ID : 65497834400
Status : Answered
Chosen Option : 4

Q.12 Select the **INCORRECTLY** spelt word.

- Ans 1. Gullible
 2. Dissimulation
 3. Magnanemous
 4. Indecisiveness

Question ID : 65497834391
Status : Answered
Chosen Option : 3

Q.13 Select the most appropriate meaning of the given idiom.

To spill the beans

- Ans 1. To work very hard
 2. To give away a secret
 3. To throw away something important
 4. To do something very difficult

Question ID : 65497834399
Status : Answered
Chosen Option : 2

Q.14 Select the most appropriate synonym of the given word.

Sullen

- Ans 1. Dazzling
 2. Smart
 3. Bright
 4. Grim

Question ID : 65497834393
Status : Answered
Chosen Option : 4

Q.15 The following sentence has been split into four segments. Identify the segment that contains a grammatical error.

The examinations / will be pushed back / so that candidates get additional time / for prepare.

- Ans 1. so that candidates get additional time
 2. will be pushed back
 3. The examinations
 4. for prepare

Question ID : 65497834392
Status : Answered
Chosen Option : 4

Q.16 Select the most appropriate meaning of the given idiom.

To take up the gauntlet

- Ans
- 1. To face failure
 - 2. To deny the challenge
 - 3. To accept a challenge
 - 4. To suffer humiliation

Question ID : 65497834395
Status : Answered
Chosen Option : 3

Q.17 Select the most appropriate option that can substitute the underlined segment in the given sentence. If there is no need to substitute it, select 'No substitution required'.

This is the garage when I get my car repaired.

- Ans
- 1. wherever
 - 2. where
 - 3. No substitution required
 - 4. whenever

Question ID : 65497834383
Status : Answered
Chosen Option : 2

Q.18 Select the most appropriate option that can substitute the underlined word in the given sentence. If there is no need to substitute it, select 'No substitution required'.

Either Sumit or Amit will give their assistance in unloading the goods from the truck.

- Ans
- 1. his
 - 2. No substitution required
 - 3. your
 - 4. its

Question ID : 65497834396
Status : Answered
Chosen Option : 1

Q.19 Select the most appropriate option to fill in the blank.

She found herself in an _____ situation and left quickly.

- Ans
- 1. abstract
 - 2. awkward
 - 3. obvious
 - 4. elegant

Question ID : 65497834394
Status : Answered
Chosen Option : 2

Q.20 Select the option that can be used as a one-word substitute for the given group of words.

A solemn promise

- Ans 1. Salute
 2. Contract
 3. Pledge
 4. Tribute

Question ID : 65497834402

Status : Answered

Chosen Option : 3

Comprehension:

In the following passage, some words have been deleted. Read the passage carefully and select the most appropriate option to fill in each blank.

Modern scientific and technological developments in the practice of medicine and public health (1)_____ nursing into new and wider fields of activity, and its functions have been expanded (2)_____. Therefore, nursing is no longer limited mainly to activities within the hospital. It has also become (3)_____ in which prevention and rehabilitation are a vital part of its program. The modern concept of nursing considers the hospital, (4)_____ central, as only one of (5)_____ in the community.

SubQuestion No : 21

Q.21 Select the most appropriate option to fill in blank no. 1.

- Ans 1. had drawn
 2. are drawn
 3. drew
 4. are drawing

Question ID : 65497834404

Status : Answered

Chosen Option : 4

Comprehension:

In the following passage, some words have been deleted. Read the passage carefully and select the most appropriate option to fill in each blank.

Modern scientific and technological developments in the practice of medicine and public health (1)_____ nursing into new and wider fields of activity, and its functions have been expanded (2)_____. Therefore, nursing is no longer limited mainly to activities within the hospital. It has also become (3)_____ in which prevention and rehabilitation are a vital part of its program. The modern concept of nursing considers the hospital, (4)_____ central, as only one of (5)_____ in the community.

SubQuestion No : 22

Q.22 Select the most appropriate option to fill in blank no. 2.

- Ans 1. respectively
 2. accordingly
 3. naturally
 4. consistently

Question ID : 65497834405

Status : Answered

Chosen Option : 4

Comprehension:

In the following passage, some words have been deleted. Read the passage carefully and select the most appropriate option to fill in each blank.

Modern scientific and technological developments in the practice of medicine and public health (1)_____ nursing into new and wider fields of activity, and its functions have been expanded (2)_____. Therefore, nursing is no longer limited mainly to activities within the hospital. It has also become (3)_____ in which prevention and rehabilitation are a vital part of its program. The modern concept of nursing considers the hospital, (4)_____ central, as only one of (5)_____ in the community.

SubQuestion No : 23

Q.23 Select the most appropriate option to fill in blank no. 3.

- Ans 1. community services
 2. the community service
 3. a community service
 4. community service

Question ID : 65497834406
Status : Answered
Chosen Option : 3

Comprehension:

In the following passage, some words have been deleted. Read the passage carefully and select the most appropriate option to fill in each blank.

Modern scientific and technological developments in the practice of medicine and public health (1)_____ nursing into new and wider fields of activity, and its functions have been expanded (2)_____. Therefore, nursing is no longer limited mainly to activities within the hospital. It has also become (3)_____ in which prevention and rehabilitation are a vital part of its program. The modern concept of nursing considers the hospital, (4)_____ central, as only one of (5)_____ in the community.

SubQuestion No : 24

Q.24 Select the most appropriate option to fill in blank no. 4.

- Ans 1. whenever
 2. however
 3. wherever
 4. whatever

Question ID : 65497834407
Status : Answered
Chosen Option : 2

Comprehension:

In the following passage, some words have been deleted. Read the passage carefully and select the most appropriate option to fill in each blank.

Modern scientific and technological developments in the practice of medicine and public health (1)_____ nursing into new and wider fields of activity, and its functions have been expanded (2)_____. Therefore, nursing is no longer limited mainly to activities within the hospital. It has also become (3)_____ in which prevention and rehabilitation are a vital part of its program. The modern concept of nursing considers the hospital, (4)_____ central, as only one of (5)_____ in the community.

SubQuestion No : 25

Q.25 Select the most appropriate option to fill in blank no. 5.

- Ans 1. the many agency
 2. the many agencies
 3. many agency
 4. many agencies

Question ID : 65497834408
Status : Answered
Chosen Option : 2

Q.1 दिए गए वाक्यांश के लिए एक शब्द का चयन करें:

असाधारण मेधा बुद्धि वाला

- Ans 1. महाज्ञानी
 2. मेधावी
 3. बुद्धिशाली
 4. बुद्धिमान

Question ID : 65497834417
Status : Not Answered
Chosen Option : --

Q.2 'सुर' का पर्यायवाची है-

- Ans 1. देवता
 2. सूर्य
 3. राक्षस
 4. सुरग

Question ID : 65497834426
Status : Not Answered
Chosen Option : --

Q.3 रिक्त स्थान की पूर्ति करने के लिए सर्वाधिक उपयुक्त विकल्प का चयन करें।

भारत का _____ किया गया।

- Ans 1. अभिवादन
 2. समापन
 3. स्वागत
 4. आवभगत

Question ID : 65497834428
Status : Not Answered
Chosen Option : --

Q.4 अशुद्ध वर्तनी वाले शब्द का चयन करें।

- Ans 1. कनिष
 2. कौतूहल
 3. महाराजा
 4. दयालु

Question ID : 65497834414
Status : Not Answered
Chosen Option : --

Q.5 रिक्त स्थान की पूर्ति करने के लिए सर्वाधिक उपयुक्त शब्द का चयन कीजिए।

नाटक _____ पर खेला जाता है।

- Ans 1. रगमच
 2. चौराहे
 3. मच
 4. मेज

Question ID : 65497834409
Status : Not Answered
Chosen Option : --

Q.6 दिए गए वाक्य का वह भाग ज्ञात करें जिसमें कोई त्रुटि है। यदि कोई त्रुटि नहीं है, तो 'कोई त्रुटि नहीं है' चुनें।

बुरा से बुरा (1)/ आदमी यह (2)/ कहता है। (3)/ कोई त्रुटि नहीं है (4)

- Ans 1. 3
 2. 2
 3. 1
 4. 4

Question ID : 65497834410
Status : Not Answered
Chosen Option : --

Q.7 सही वर्तनी वाले शब्द का चयन करें।

- Ans 1. शुषुम्ना
 2. सुषुम्ना
 3. शसुम्ना
 4. सुशुम्ना

Question ID : 65497834413
Status : Not Answered
Chosen Option : --

Q.8 दिए गए शब्द के समानार्थी शब्द का चयन कीजिए।

अटवी

- Ans 1. जगल
 2. अडिग
 3. अचल
 4. अटल

Question ID : 65497834411
Status : Not Answered
Chosen Option : --

Q.9 दिए गए वाक्य के किस भाग में त्रुटि है?

भारत में अनेक प्रदेशिक भाषाएँ हैं।

- Ans
- 1. प्रदेशिक
 - 2. भारत में
 - 3. अनेक
 - 4. भाषाएँ हैं।

Question ID : 65497834425
Status : Not Answered
Chosen Option : --

Q.10 दिए गए वाक्यांश के लिए एक शब्द का चयन करें:

विस्थापित लोगो को पुनः बसाना

- Ans
- 1. पुनर्वा
 - 2. पुनरावृत्ति
 - 3. पुनर्वास
 - 4. पुनरुक्ति

Question ID : 65497834424
Status : Not Answered
Chosen Option : --

Q.11 दिए गए शब्द का विलोम चुने –

उर्वरा

- Ans
- 1. ऊसर
 - 2. मोक्ष
 - 3. क्षुद्र
 - 4. सपन्न

Question ID : 65497834423
Status : Not Answered
Chosen Option : --

Q.12 दिए गए वाक्य में रेखांकित खंड को प्रतिस्थापित करने के लिए सर्वाधिक उपयुक्त विकल्प का चयन करें। यदि इसे प्रतिस्थापित करने की आवश्यकता नहीं है, तो विकल्प 'किसी बदलाव की आवश्यकता नहीं है' का चयन करें।

सुधा भूख में बेचैन है।

- Ans
- 1. भूख के
 - 2. भूख में
 - 3. भूख से
 - 4. किसी बदलाव की आवश्यकता नहीं है।

Question ID : 65497834412
Status : Not Answered
Chosen Option : --

Q.13 'गले का हार होना' मुहावरे का सही अर्थ है-

- Ans 1. समस्या पैदा करना
 2. बहुत प्यारा होना
 3. बहुत कीमती होना
 4. गहरी मित्रता होना

Question ID : 65497834427
Status : Not Answered
Chosen Option : --

Q.14 निम्नलिखित प्रश्न में, दिए गए चार विकल्पों में से उस विकल्प का चयन करें, जो मुहावरे के सही अर्थ को व्यक्त करता है।

पहाड़ टूटना

- Ans 1. भारी विपत्ति आना
 2. विपत्ति के समय कोई साथ न देना
 3. पहाड़ टूट कर गिरना
 4. खूब लाभ उठाना

Question ID : 65497834416
Status : Not Answered
Chosen Option : --

Q.15 दिए गए वाक्य का वह भाग ज्ञात करें जिसमें कोई त्रुटि है। यदि कोई त्रुटि नहीं है, तो 'कोई त्रुटि नहीं है' चुनें।

आपसी मनमुटाव को सामने - आमने बैठकर बातचीत से दूर करें।

- Ans 1. बातचीत से दूर करें।
 2. कोई त्रुटि नहीं है।
 3. सामने - आमने बैठकर
 4. आपसी मनमुटाव को

Question ID : 65497834422
Status : Not Answered
Chosen Option : --

Q.16 रिक्त स्थान की पूर्ति करने के लिए सर्वाधिक उपयुक्त शब्द का चयन करें।

लड़का बीमार है _____ पढ़ने नहीं आया।

- Ans 1. इससे
 2. क्योंकि
 3. इसलिए
 4. कदाचित्

Question ID : 65497834419
Status : Not Answered
Chosen Option : --

Q.17 दिए गए वाक्य में रेखांकित खंड को प्रतिस्थापित करने के लिए सर्वाधिक उपयुक्त विकल्प का चयन करें। यदि इसे प्रतिस्थापित करने की आवश्यकता नहीं है, तो विकल्प 'किसी बदलाव की आवश्यकता नहीं है' का चयन करें।

कई रेलवे के कर्मचारियों की गिरफ्तारी हुई।

- Ans
- 1. कईयों की रेलवे
 - 2. किसी बदलाव की आवश्यकता नहीं है।
 - 3. रेलवे के कई
 - 4. कई के रेलवे

Question ID : 65497834420

Status : Not Answered

Chosen Option : --

Q.18 दिए गए शब्द का विलोम चुनें।

क्रूर

- Ans
- 1. दयालु
 - 2. असुर
 - 3. विधुर
 - 4. निष्ठुर

Question ID : 65497834415

Status : Not Answered

Chosen Option : --

Q.19 निम्नलिखित प्रश्न में, दिए गए चार विकल्पों में से उस विकल्प का चयन करें, जो मुहावरे के सही अर्थ को व्यक्त करता है।

हाथ मलना-

- Ans
- 1. खो देना
 - 2. दोनों हाथों को मसलना
 - 3. हार मान लेना
 - 4. पछताना

Question ID : 65497834421

Status : Not Answered

Chosen Option : --

Q.20 दिए गए वाक्य में रेखांकित खंड को प्रतिस्थापित करने के लिए सर्वाधिक उपयुक्त विकल्प का चयन करें। यदि इसे प्रतिस्थापित करने की आवश्यकता नहीं है, तो विकल्प 'किसी बदलाव की आवश्यकता नहीं है' का चयन करें।

जगली जानवर, चिड़ियाघर में हमारे मनोरंजन ही करते हैं।

- Ans
- 1. किसी बदलाव की आवश्यकता नहीं है।
 - 2. हमारा मनोरंजन ही करते हैं।
 - 3. हमारे मनोरंजन ही करता हैं।
 - 4. हमारे मनोरंजन ही कर रहे हैं।

Question ID : 65497834418

Status : Not Answered

Chosen Option : --

Comprehension:

दिए गए गद्यांश में से कुछ शब्द हटा दिए गए हैं, दिए गए विकल्पों की सहायता से रिक्त स्थान की पूर्ति करें, प्रत्येक सख्खा के लिए सर्वाधिक उपयुक्त विकल्प का चयन करें।

सकारात्मक सोच व्यक्ति को (1) _____ की ओर ले जाती है। कहा भी जाता है कि मन के हारे हार है, मन के जीते (2) _____। जीवन एक सघर्ष है और इसका हमें (3) _____ होकर सामना करना चाहिए। सकारात्मक सोच से ऊर्जा प्राप्त होती है और हमारा (4) _____ बढ़ता है। निराशा हमें कमजोर बनाती है जबकि आशा नई (5) _____ दिखाती है।

SubQuestion No : 21

Q.21 गद्यांश के रिक्त स्थान (1) के लिए सर्वाधिक उपयुक्त शब्द होगा-

- Ans
- 1. असफलता
 - 2. पतन
 - 3. सफलता
 - 4. सघर्ष

Question ID : 65497834430

Status : Not Answered

Chosen Option : --

Comprehension:

दिए गए गद्यांश में से कुछ शब्द हटा दिए गए हैं, दिए गए विकल्पों की सहायता से रिक्त स्थान की पूर्ति करें, प्रत्येक सख्खा के लिए सर्वाधिक उपयुक्त विकल्प का चयन करें।

सकारात्मक सोच व्यक्ति को (1) _____ की ओर ले जाती है। कहा भी जाता है कि मन के हारे हार है, मन के जीते (2) _____। जीवन एक सघर्ष है और इसका हमें (3) _____ होकर सामना करना चाहिए। सकारात्मक सोच से ऊर्जा प्राप्त होती है और हमारा (4) _____ बढ़ता है। निराशा हमें कमजोर बनाती है जबकि आशा नई (5) _____ दिखाती है।

SubQuestion No : 22

Q.22 गद्यांश के रिक्त स्थान (2) के लिए सर्वाधिक उपयुक्त शब्द होगा-

- Ans
- 1. आनंद
 - 2. पीड़ा
 - 3. प्रसन्नता
 - 4. जीत

Question ID : 65497834431

Status : Not Answered

Chosen Option : --

Comprehension:

दिए गए गद्यांश में से कुछ शब्द हटा दिए गए हैं, दिए गए विकल्पों की सहायता से रिक्त स्थान की पूर्ति करें, प्रत्येक सख्खा के लिए सर्वाधिक उपयुक्त विकल्प का चयन करें।

सकारात्मक सोच व्यक्ति को (1) _____ की ओर ले जाती है। कहा भी जाता है कि मन के हारे हार है, मन के जीते (2) _____। जीवन एक सघर्ष है और इसका हमें (3) _____ होकर सामना करना चाहिए। सकारात्मक सोच से ऊर्जा प्राप्त होती है और हमारा (4) _____ बढ़ता है। निराशा हमें कमजोर बनाती है जबकि आशा नई (5) _____ दिखाती है।

SubQuestion No : 23

Q.23 गद्यांश के रिक्त स्थान (3) के लिए सर्वाधिक उपयुक्त शब्द होगा-

- Ans
- 1. लापरवाह
 - 2. बेपरवाह
 - 3. निडर
 - 4. भयभीत

Question ID : 65497834432

Status : Not Answered

Chosen Option : --

Comprehension:

दिए गए गद्यांश में से कुछ शब्द हटा दिए गए हैं, दिए गए विकल्पों की सहायता से रिक्त स्थान की पूर्ति करें, प्रत्येक सख्या के लिए सर्वाधिक उपयुक्त विकल्प का चयन करें।

सकारात्मक सोच व्यक्ति को (1) _____ की ओर ले जाती है। कहा भी जाता है कि मन के हारे हार है, मन के जीते (2) _____। जीवन एक संघर्ष है और इसका हमें (3) _____ होकर सामना करना चाहिए। सकारात्मक सोच से ऊर्जा प्राप्त होती है और हमारा (4) _____ बढ़ता है। निराशा हमें कमजोर बनाती है जबकि आशा नई (5) _____ दिखाती है।

SubQuestion No : 24

Q.24 गद्यांश के रिक्त स्थान (4) के लिए सर्वाधिक उपयुक्त शब्द होगा-

- Ans
- 1. दायरा
 - 2. साम्राज्य
 - 3. आत्मविश्वास
 - 4. कार्य

Question ID : 65497834433

Status : Not Answered

Chosen Option : --

Comprehension:

दिए गए गद्यांश में से कुछ शब्द हटा दिए गए हैं, दिए गए विकल्पों की सहायता से रिक्त स्थान की पूर्ति करें, प्रत्येक सख्या के लिए सर्वाधिक उपयुक्त विकल्प का चयन करें।

सकारात्मक सोच व्यक्ति को (1) _____ की ओर ले जाती है। कहा भी जाता है कि मन के हारे हार है, मन के जीते (2) _____। जीवन एक संघर्ष है और इसका हमें (3) _____ होकर सामना करना चाहिए। सकारात्मक सोच से ऊर्जा प्राप्त होती है और हमारा (4) _____ बढ़ता है। निराशा हमें कमजोर बनाती है जबकि आशा नई (5) _____ दिखाती है।

SubQuestion No : 25

Q.25 गद्यांश के रिक्त स्थान (5) के लिए सर्वाधिक उपयुक्त शब्द होगा-

- Ans
- 1. राह
 - 2. दुनिया
 - 3. बात
 - 4. जीवन

Question ID : 65497834434

Status : Not Answered

Chosen Option : --

**SSC
GD**

Previous Year Paper
15 Dec 2021 Shift 3
English

Exam Date	15/12/2021
Exam Time :	4:00 PM - 5:30 PM
Subject	Constable GD 2021

Section : Part A General Intelligence and Reasoning

Q.1 Select the option in which the numbers are related in the same way as are the numbers in the given set.

(15, 48, 98)

- Ans 1. (21, 66, 134)
 2. (18, 58, 101)
 3. (24, 74, 150)
 4. (17, 55, 105)

Question ID : 65497834818
Status : Not Answered
Chosen Option : --

Q.2 Select the option that is related to the third letter-cluster in the same way as the second letter-cluster is related to the first letter-cluster.

IMR : VRM :: FJO : ?

- Ans 1. TPJ
 2. TRL
 3. SOJ
 4. TPK

Question ID : 65497834838
Status : Answered
Chosen Option : 3

Q.3 Select the combination of letters that when sequentially placed in the blanks of the given series will complete the series.

E J _ F K _ _ _ Q H _ _ I _ S

- Ans 1. RLMOPGN
 2. GOMRNLP
 3. OPGLMRN
 4. PGRNMOL

Question ID : 65497834830
Status : Answered
Chosen Option : 3

Q.4 If 'ORCHID' is known as 'DAISY', 'DAISY' is known as 'LOTUS', 'LOTUS' is known as 'JASMINE' and 'JASMINE' is known as 'TULIP', then what is the national flower of India?

- Ans
- 1. DAISY
 - 2. TULIP
 - 3. LOTUS
 - 4. JASMINE

Question ID : 65497834839
Status : Answered
Chosen Option : 4

Q.5 Four letter-clusters have been given, out of which three are alike in some manner and one is different. Select the letter-cluster that is different.

- Ans
- 1. ABEJ
 - 2. UCGK
 - 3. OPSX
 - 4. EFIN

Question ID : 65497834825
Status : Answered
Chosen Option : 2

Q.6 In a certain code language, 'DECK' is written as 'EGFO'. How will 'FINDER' be written in that language?

- Ans
- 1. GJODFS
 - 2. GKQHJX
 - 3. GKPFGU
 - 4. GHOGIX

Question ID : 65497834816
Status : Answered
Chosen Option : 2

Q.7 Select the correct mirror image of the given combination when the mirror is placed at 'PQ' as shown.

NAHARIA
P
|
Q

- Ans
- 1. AIRAHAI
 - 2. AIRAHAI
 - 3. NAHARIA
 - 4. AHAIAR

Question ID : 65497834828
Status : Answered
Chosen Option : 2

Q.8 Anuj's salary is twice the salary of Manoj. Ramnathan's salary is half the salary of Vikram. Manoj's salary is ₹15,000 less than the salary of Ramnathan. If the salary of Anuj is ₹20,000, what is the total salary of all the four persons?

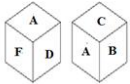
- Ans
- 1. ₹1,30,000
 - 2. ₹1,00,000
 - 3. ₹1,05,000
 - 4. ₹1,15,000

Question ID : 65497834819

Status : Answered

Chosen Option : 3

Q.9 Two different positions of the same dice are shown, the six faces of which are marked with the letters A to F. Select the letter that will be on the face opposite to the one having A.



- Ans
- 1. C
 - 2. B
 - 3. E
 - 4. F

Question ID : 65497834836

Status : Answered

Chosen Option : 3

Q.10 If '-' stands for '+', '+' stands for 'x', '÷' stands for '-' and 'x' stands for '+', then $80 - 20 + 10 \div 8 \times 10$ is equal to:

- Ans
- 1. 42
 - 2. 45
 - 3. 78
 - 4. 68

Question ID : 65497834835

Status : Answered

Chosen Option : 1

Q.11 In a code language, SHOT is coded as 3881540. How will WINE be coded in that language?

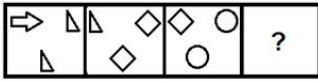
- Ans
- 1. 4615137
 - 2. 3231592
 - 3. 4610412
 - 4. 4691410

Question ID : 65497834826

Status : Answered

Chosen Option : 4

Q.12 Select the figure from among the given options that can replace the question mark (?) in the following series.



Ans

✗ 1.



✓ 2.



✗ 3.



✗ 4.



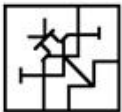
Question ID : 65497834832
 Status : Answered
 Chosen Option : 2

Q.13 Select the option in which the given figure is embedded (rotation is NOT allowed).

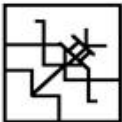


Ans

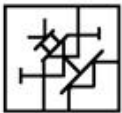
✗ 1.



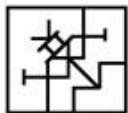
✗ 2.



✗ 3.



✓ 4.



Question ID : 65497834837
 Status : Answered
 Chosen Option : 4

Q.14 Select the number from among the given options that can replace the question mark (?) in the following series.

5, 7, 14, 16, 32, ?

Ans 1. 34

2. 48

3. 36

4. 64

Question ID : 65497834831

Status : Answered

Chosen Option : 1

Q.15 Select the option that is related to the third word in the same way as the second word is related to the first word.

Dog : Bark :: Bird : ?

Ans 1. Chirp

2. Croak

3. Bleat

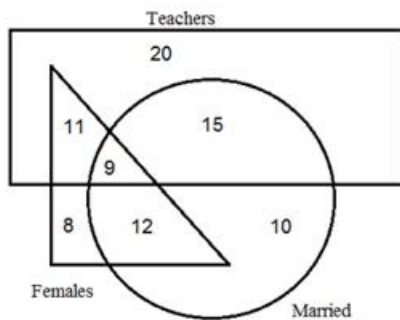
4. Growl

Question ID : 65497834822

Status : Not Answered

Chosen Option : --

Q.16 Study the given diagram carefully and answer the question that follows.



What is the number of female teachers who are NOT married?

Ans 1. 8

2. 11

3. 12

4. 9

Question ID : 65497834824

Status : Answered

Chosen Option : 2

Q.17 Select the correct option that indicates the arrangement of the given words in the order in which they appear in an English dictionary.

1. Species
2. Specify
3. Special
4. Specific
5. Speaker

- Ans 1. 1, 5, 3, 2, 4
2. 5, 3, 1, 4, 2
3. 1, 5, 3, 4, 2
4. 3, 1, 5, 4, 2

Question ID : 65497834829

Status : Answered

Chosen Option : 2

Q.18 Read the given statements and conclusions carefully. Assuming that the information given in the statements is true, even if it appears to be at variance with commonly known facts, decide which of the given conclusions logically follow(s) from the statements.

Statements:

1. All cities are villages.
2. No country is a city.

Conclusions:

- I. No country is a village.
- II. No village is a city.

- Ans 1. Neither conclusion I nor II follows
2. Only conclusion I follows
3. Only conclusion II follows
4. Both the conclusions follow

Question ID : 65497834817

Status : Answered

Chosen Option : 1

Q.19 Six friends, P, Q, R, S, T and U, are sitting around a circular table, facing the centre of the table. P is second to right of S. Q is sitting to the immediate left of T. P is sitting between R and U. S is sitting to the immediate left of R. Who is sitting between P and S?

- Ans 1. T
2. R
3. U
4. Q

Question ID : 65497834823

Status : Answered

Chosen Option : 2

Q.20 Six members (A, B, C, D, E, and F) of a family decide to have a family photo taken, and are sitting on a bed to be photographed. B is to the right of D, A is between F and C. E is standing at one of the ends and is second to the left of A. F always wants to stand next to D. Who is third from the left in the photograph?

- Ans 1. C
2. F
3. A
4. D

Question ID : 65497834833

Status : Answered

Q.21 A is the husband of B, C is the mother-in-law of B, D is the father of A, E is the mother of D, F is the mother of C and G. If H is the father of D, then what is the relation of H with E?

- Ans
- 1. Father-in-law
 - 2. Brother
 - 3. Husband
 - 4. Father

Question ID : 65497834840
Status : Answered
Chosen Option : 3

Q.22 Select the number from among the given options that can replace the question mark (?) in the following series.

20, 21, 25, 34, ?, 75

- Ans
- 1. 45
 - 2. 51
 - 3. 55
 - 4. 50

Question ID : 65497834827
Status : Answered
Chosen Option : 4

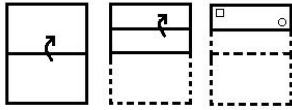
Q.23 Select the option that is related to the third number in the same way as the second number is related to the first number.

10 : 109 :: 12 : ?

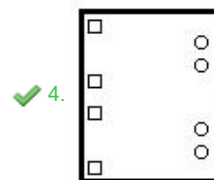
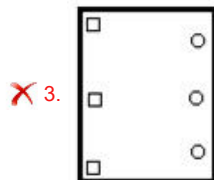
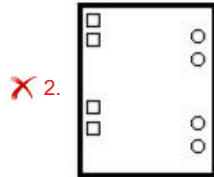
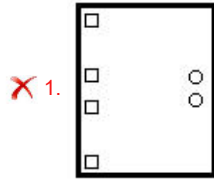
- Ans
- 1. 129
 - 2. 136
 - 3. 139
 - 4. 132

Question ID : 65497834834
Status : Answered
Chosen Option : 2

Q.24 The sequence of folding a piece of paper and the manner in which the folded paper has been cut is shown in the following figures. How would this paper look when unfolded?



Ans



Question ID : 65497834820
 Status : Answered
 Chosen Option : 4

Q.25 Select the letter-cluster from among the given options that can replace the question mark (?) in the following series.

NIR, JGN, FEJ, ?

- Ans
- ✓ 1. BCF
 - ✗ 2. DDF
 - ✗ 3. CDE
 - ✗ 4. ADE

Question ID : 65497834821
 Status : Answered
 Chosen Option : 1

Section : Part B General Knowledge and General Awareness

Q.1 Which of the following dance forms is NOT a classical dance form?

- Ans
- ✗ 1. Kuchipudi
 - ✗ 2. Odissi
 - ✓ 3. Bhrakatha
 - ✗ 4. Manipuri

Question ID : 65497834854
 Status : Answered

Q.2 What is the shallowest part of an ocean showing an average gradient of 1° or even less called?

- Ans
- 1. Continental slope
 - 2. Deep sea plain
 - 3. Continental shelf
 - 4. Oceanic trench

Question ID : 65497834841
Status : Answered
Chosen Option : 3

Q.3 Where did table tennis originate from?

- Ans
- 1. China
 - 2. England
 - 3. India
 - 4. Japan

Question ID : 65497834847
Status : Answered
Chosen Option : 4

Q.4 How much water carried by the Indus river system can India use under the Indus water treaty (1960)?

- Ans
- 1. 20%
 - 2. 15%
 - 3. 10%
 - 4. 25%

Question ID : 65497834853
Status : Answered
Chosen Option : 1

Q.5 Which of the following states hosts the annual Surajkund crafts fair?

- Ans
- 1. Uttar Pradesh
 - 2. Himachal Pradesh
 - 3. Haryana
 - 4. Uttarakhand

Question ID : 65497834857
Status : Answered
Chosen Option : 2

Q.6 Who among the following won the 'Gulbenkian Prize for Humanity' in 2020?

- Ans
- 1. Imran Khan
 - 2. Narendra Modi
 - 3. S Hussain Zaidi
 - 4. Greta Thunberg

Question ID : 65497834850
Status : Answered
Chosen Option : 2

Q.7 Having opened its Twitter account in _____, the Reserve Bank of India had more than 1 million followers on its official Twitter handle by November 2020.

- Ans
- 1. July 2016
 - 2. April 2014
 - 3. October 2018
 - 4. January 2012

Question ID : 65497834865
Status : Answered
Chosen Option : 4

Q.8 In August 2020, two coastal villages of which of the following states were declared 'Tsunami Ready' by the Intergovernmental Oceanographic Commission of UNESCO for their overall preparedness to face the calamity?

- Ans
- 1. Kerala
 - 2. Karnataka
 - 3. Gujarat
 - 4. Odisha

Question ID : 65497834846
Status : Answered
Chosen Option : 2

Q.9 What is NOT true about the livestock sector as per the Economic Survey of India 2020?

- Ans
- 1. Livestock sector has been growing at a Compound Annual Growth Rate (CAGR) of 7.9 per cent during last five years.
 - 2. Livestock has a potential to replace the agricultural sector.
 - 3. Livestock income has become an important secondary source of income for millions of rural families.
 - 4. It has assumed an important role in achieving the goal of doubling farmer's income.

Question ID : 65497834842
Status : Answered
Chosen Option : 1

Q.10 Who among the following was the court poet of Alauddin Khilji who wrote the famous poem 'Hasht-Bihisht'?

- Ans
- 1. Amir Khusrau
 - 2. Chand Bardai
 - 3. Agha Hasan Amanat
 - 4. Harisena

Question ID : 65497834843
Status : Answered
Chosen Option : 1

Q.11 Which among the following methods do most Indian households use for obtaining safe drinking water?

- Ans
- 1. Freezing
 - 2. Storing
 - 3. Recycling
 - 4. Boiling

Question ID : 65497834858
Status : Answered
Chosen Option : 3

Q.12 In which of the following oceans is Torres Strait located?

- Ans
- 1. Indian Ocean
 - 2. Arctic Ocean
 - 3. Atlantic Ocean
 - 4. Pacific Ocean

Question ID : 65497834849
Status : Answered
Chosen Option : 1

Q.13 Which of the following Indian sport shooters won the gold medal in the 10 metre air pistol event in 2019?

- Ans
- 1. Saurabh Chaudhary
 - 2. Apurvi Chandela
 - 3. Anjali Bhagwat
 - 4. Heena Sidhu

Question ID : 65497834855
Status : Answered
Chosen Option : 4

Q.14 Who among the following is the ex-officio chairperson of the National Disaster Management Authority?

- Ans
- 1. President
 - 2. Home Minister
 - 3. Prime Minister
 - 4. Vice President

Question ID : 65497834845
Status : Answered
Chosen Option : 3

Q.15 To whom was the 'I-League' trophy handed in 2019-20?

- Ans
- 1. United Sikkim
 - 2. East Bengal
 - 3. Mohun Bagan
 - 4. Dempo Goa

Question ID : 65497834851
Status : Answered
Chosen Option : 4

Q.16 When carbon dioxide is increased in the atmosphere, it leads to _____.

- Ans
- 1. global warming
 - 2. air pressure
 - 3. conservation
 - 4. rains

Question ID : 65497834859
Status : Answered
Chosen Option : 1

Q.17 What is the other name for Riboflavin?

- Ans 1. Vitamin B2
 2. Vitamin A
 3. Vitamin D
 4. Vitamin C

Question ID : 65497834852
Status : Answered
Chosen Option : 3

Q.18 Gandhiji organised a satyagraha among cotton mill workers at Ahmedabad in the year _____.

- Ans 1. 1921
 2. 1918
 3. 1929
 4. 1915

Question ID : 65497834862
Status : Answered
Chosen Option : 1

Q.19 The Taj Mahal is located in the city of Agra on the banks of the river_____.

- Ans 1. Chambal
 2. Ganga
 3. Yamuna
 4. Ghaghara

Question ID : 65497834848
Status : Answered
Chosen Option : 3

Q.20 According to the World Bank's Logistics Performance Index, among other countries India ranked _____ in 2018, up from the 54th rank in 2014.

- Ans 1. 44th
 2. 42nd
 3. 40th
 4. 52nd

Question ID : 65497834844
Status : Answered
Chosen Option : 2

Q.21 Prime Minister of India Narendra Modi and Prime Minister of Bhutan Lotay Tshering virtually launched _____ to allow Bhutanese cardholders to access RuPay network in India.

- Ans 1. RuPay International Card
 2. One Nation One Card
 3. RuPay card Phase I
 4. RuPay card Phase II

Question ID : 65497834856
Status : Answered
Chosen Option : 4

Q.22 Article _____ of the Constitution of India lays down that the State shall endeavour to secure for the citizens a uniform civil code throughout the territory of India.

- Ans 1. 44
 2. 49
 3. 42
 4. 40

Question ID : 65497834864
Status : Answered
Chosen Option : 2

Q.23 Who is the author of the book 'An Era of Darkness: The British Empire in India'?

- Ans 1. Shashi Tharoor
 2. Mira Nair
 3. Arun Jaitley
 4. Chetan Bhagat

Question ID : 65497834860
Status : Answered
Chosen Option : 2

Q.24 Which of the following agreements between India and Pakistan is also known as the 'Nehru-Liaquat Agreement'?

- Ans 1. Agreement between India and Pakistan regarding resumption of rail traffic
 2. Agreement between India and Pakistan regarding security and rights of minorities
 3. Agreement between India and Pakistan relating to air services
 4. Agreement for avoidance of double taxation between India and Pakistan

Question ID : 65497834863
Status : Answered
Chosen Option : 2

Q.25 The value of all final goods and services produced within a country is called the:

- Ans 1. GDP
 2. VAT
 3. IMR
 4. GST

Question ID : 65497834861
Status : Answered
Chosen Option : 1

Section : Part C Elementary Mathematics

Q.1 A man travelled a distance of 47 km in 6 hours. He travelled partly on foot at a speed of $6\frac{1}{2}$ km/h and the rest on bicycle at a speed of $8\frac{1}{2}$ km/h. The distance travelled (in km) on bicycle is:

- Ans 1. 17
 2. 13
 3. 30
 4. 34

Question ID : 65497834872
Status : Not Answered
Chosen Option : --

Q.2 The simple interest on a certain sum of money at the rate of 7.5% p.a. for 8 years is ₹4,080. At what rate of interest can the same amount of interest be received on the same sum for 5 years?

- Ans**
- 1. 10.5%
 - 2. 12%
 - 3. 11%
 - 4. 9%

Question ID : 65497834874
Status : Answered
Chosen Option : 2

Q.3 A sum was put at simple interest at a certain rate for 2 years. If it had been put at 4% higher rate, it would have fetched ₹480 more. Find the sum.

- Ans**
- 1. ₹6,000
 - 2. ₹5,000
 - 3. ₹6,500
 - 4. ₹5,900

Question ID : 65497834884
Status : Answered
Chosen Option : 1

Q.4 The value of 2 of $5 - \frac{1}{2} - \left[4 \div 2 - \frac{1}{3} - \left\{ \frac{3}{4} - \left(5 - \frac{1}{2} - \frac{3}{4} \right) \right\} \right]$ is:

- Ans**
- 1. $\frac{1}{6}$
 - 2. $\frac{10}{3}$
 - 3. $\frac{7}{6}$
 - 4. $\frac{13}{2}$

Question ID : 65497834879
Status : Answered
Chosen Option : 2

Q.5 The value of $\{5 - 5 \div (10 - 12) \times 8 + 9\} \times 3 + 5 + 5 \times 5 \div 5$ of 5 is:

- Ans**
- 1. 57
 - 2. 114
 - 3. 102
 - 4. 108

Question ID : 65497834888
Status : Not Answered
Chosen Option : --

Q.6 A can complete 40% of a work in 6 days and B can complete $33\frac{1}{3}\%$ of the same work in 8 days. They work together for 8 days. C alone completes the remaining work in 4 days. A and C together will complete the same work in:

- Ans**
- 1. $13\frac{1}{8}$ days
 - 2. 12 days
 - 3. 9 days
 - 4. 10 days

Question ID : 65497834890
Status : Answered
Chosen Option : 4

Q.7 The length, breadth and height of a solid cuboidal box are in the ratio 7 : 5 : 3 and its total surface area is 11502 cm^2 . Its breadth is:

- Ans**
- 1. 27 cm
 - 2. 56 cm
 - 3. 81 cm
 - 4. 45 cm

Question ID : 65497834876
Status : Answered
Chosen Option : 4

Q.8 The average age of 26 students in a class is 15 years. If teacher's age is included in it, then the average will increase by one. What is the teacher's age (in years)?

- Ans**
- 1. 38
 - 2. 40
 - 3. 42
 - 4. 33

Question ID : 65497834882
Status : Answered
Chosen Option : 3

Q.9 Find the greatest number of four digits which is divisible by 14, 30 and 42.

- Ans**
- 1. 9780
 - 2. 9880
 - 3. 9870
 - 4. 9098

Question ID : 65497834881
Status : Answered
Chosen Option : 3

Q.10 A man sold 30 articles for ₹100 and gained 20%. The number of articles he bought for ₹100 was:

- Ans**
- 1. 28
 - 2. 24
 - 3. 36
 - 4. 32

Question ID : 65497834878
Status : Answered
Chosen Option : 3

Q.11 A money lender finds that due to a fall in the annual rate of interest from 10% to $8\frac{3}{4}\%$, his year's income diminishes by ₹84.50. Find his capital.

- Ans**
- 1. ₹7,660
 - 2. ₹6,940
 - 3. ₹6,760
 - 4. ₹7,460

Question ID : 65497834886
Status : Answered
Chosen Option : 3

Q.12 On selling an article for ₹984, Arun loses 18%. In order to gain 15%, he must sell it for:

- Ans**
- 1. ₹1,440
 - 2. ₹1,132
 - 3. ₹1,265
 - 4. ₹1,380

Question ID : 65497834889
Status : Answered
Chosen Option : 4

Q.13 Find the unknown value of 'x' in the proportion $(5x + 1) : 3 = (x + 3) : 7$

- Ans**
- 1. 1/8
 - 2. 1/14
 - 3. 1/17
 - 4. 1/16

Question ID : 65497834875
Status : Answered
Chosen Option : 4

Q.14 Jagat Singh sold an article for ₹6,000 and incurred a loss. Had he sold it for ₹7,400, his profit would have been $\frac{2}{3}$ of the amount of loss that he incurred. At what price should he sell it to gain 25% profit?

- Ans**
- 1. ₹8,550
 - 2. ₹7,500
 - 3. ₹8,500
 - 4. ₹7,550

Question ID : 65497834873
Status : Answered
Chosen Option : 2

Q.15 The ratio of three numbers is 3 : 5 : 4 and the sum of their squares is 11250. Find the sum of the numbers.

- Ans**
- 1. 180
 - 2. 150
 - 3. 225
 - 4. 165

Question ID : 65497834883
Status : Answered
Chosen Option : 1

Q.16 A car is moving at a uniform speed of 35 km/h. What is the time it takes to cover 140 km?

- Ans**
- 1. 300 minutes
 - 2. 240 minutes
 - 3. 250 minutes
 - 4. 200 minutes

Question ID : 65497834880
Status : Answered
Chosen Option : 2

Q.17 Two candidates are contesting in an election. All votes are valid votes. A candidate who gets 38% of votes is rejected by 28,800 votes. The total number of votes polled is:

- Ans**
- 1. 1,15,000
 - 2. 1,50,000
 - 3. 1,32,500
 - 4. 1,20,000

Question ID : 65497834870
Status : Answered
Chosen Option : 4

Q.18 The average age of $66\frac{2}{3}\%$ of the number of children in a group is 13 years. The average age of all the children in the group is 14.5 years. What is the average age (in years) of the remaining children?

- Ans**
- 1. 16.5
 - 2. 15
 - 3. 13.5
 - 4. 17.5

Question ID : 65497834868
Status : Answered
Chosen Option : 4

Q.19 If decreasing 90 by $k\%$ gives the same result as increasing 60 by $k\%$, then $k\%$ of 120 is how much per cent of $[(k+20)\%$ of 150]?

- Ans**
- 1. 76.42
 - 2. 40
 - 3. 60
 - 4. 45

Question ID : 65497834867
Status : Answered
Chosen Option : 2

Q.20 After getting two successive discounts, Seema got a shirt at ₹153, for which the marked price was ₹200. If the second discount was 15%, the first discount was:

- Ans**
- 1. 20%
 - 2. 25%
 - 3. 10%
 - 4. 15%

Question ID : 65497834877
Status : Answered
Chosen Option : 4

Q.21 If the surface areas of two spheres are in the ratio of 4 : 25, then find the ratio of their volumes.

- Ans**
- 1. 5 : 2
 - 2. 125 : 8
 - 3. 8 : 125
 - 4. 4 : 25

Question ID : 65497834887
Status : Answered
Chosen Option : 3

Q.22 A can complete 25% of the work in 4 days, B can complete 50% of the same work in 12 days and C can complete the same work in 32 days. They started working together but C left after 4 days of the start and A left 6 days before the completion of the work. In how many days was the work completed?

- Ans**
- 1. 10 days
 - 2. 12 days
 - 3. 8 days
 - 4. 14 days

Question ID : 65497834871
Status : Answered
Chosen Option : 1

Q.23 A number is three times another number and their HCF is 8. What is the sum of the squares of the numbers?

- Ans**
- 1. 640
 - 2. 512
 - 3. 1024
 - 4. 1000

Question ID : 65497834866
Status : Answered
Chosen Option : 2

Q.24 The sum of three numbers is 118. If the ratio of the first number to the second number is 3 : 4 and that of the second number to the third number is 5 : 6. Find the third number.

- Ans**
- 1. 30
 - 2. 58
 - 3. 48
 - 4. 40

Question ID : 65497834885
Status : Answered
Chosen Option : 3

Q.25 An article was sold for ₹1,215 after giving a discount of 19%. If a discount of 17.5% is given, then for how much (in ₹) should the article be sold?

- Ans**
- 1. 1,527.30
 - 2. 1,327.50
 - 3. 1,237.50
 - 4. 1,723.50

Question ID : 65497834869
Status : Answered
Chosen Option : 3

Q.1 The following sentence has been split into four segments. Identify the segment that contains a grammatical error.

Did you forgot / to post / the letter / that I gave you?

- Ans
- 1. the letter
 - 2. to post
 - 3. Did you forgot
 - 4. that I gave you

Question ID : 65497834908
Status : Answered
Chosen Option : 3

Q.2 Select the INCORRECTLY spelt word.

- Ans
- 1. Glich
 - 2. Glove
 - 3. Glade
 - 4. Gleam

Question ID : 65497834904
Status : Answered
Chosen Option : 1

Q.3 Select the INCORRECTLY spelt word.

- Ans
- 1. Guarantee
 - 2. Discipline
 - 3. Appreciate
 - 4. Guidance

Question ID : 65497834905
Status : Answered
Chosen Option : 2

Q.4 Select the most appropriate option that can substitute the underlined segment in the given sentence. If there is no need to substitute it, select 'No substitution required'.

There are still some sugar in the bowl.

- Ans
- 1. is still some sugar
 - 2. are still little sugar
 - 3. No substitution required
 - 4. is still few sugar

Question ID : 65497834897
Status : Answered
Chosen Option : 3

Q.5 Select the option that can be used as a one-word substitute for the given group of words.

A collection of sticks

- Ans** 1. Bundle
 2. Bevy
 3. Brood
 4. Bale

Question ID : 65497834910
Status : Answered
Chosen Option : 1

Q.6 Select the most appropriate option to fill in the blank.

It is believed that physical exercise is _____ for creating a balance between the body and the mind.

- Ans** 1. essential
 2. forceful
 3. demanding
 4. increased

Question ID : 65497834906
Status : Answered
Chosen Option : 1

Q.7 Select the most appropriate ANTONYM of the given word.

Gallant

- Ans** 1. Courageous
 2. Cowardly
 3. Heroic
 4. Valiant

Question ID : 65497834902
Status : Answered
Chosen Option : 2

Q.8 Select the most appropriate option that can substitute the underlined segment in the given sentence. If there is no need to substitute it, select 'No substitution required'.

Fred and Andrew were training for the Asian games.

- Ans** 1. is training for
 2. is being training for
 3. No substitution required
 4. were being training for

Question ID : 65497834901
Status : Answered
Chosen Option : 3

Q.9 Select the most appropriate SYNONYM of the given word.

Disrupt

- Ans 1. Disturb
 2. Disgrace
 3. Disagree
 4. Discuss

Question ID : 65497834909
Status : Answered
Chosen Option : 4

Q.10 Select the most appropriate option to fill in the blank.

The novel presents a theme of betrayal in a _____ manner.

- Ans 1. harmful
 2. tableful
 3. fruitful
 4. skilful

Question ID : 65497834895
Status : Answered
Chosen Option : 1

Q.11 Select the most appropriate option that can substitute the underlined segment in the given sentence. If there is no need to substitute it, select 'No substitution required'.

It didn't dawn on me until much later that he doesn't like me.

- Ans 1. till late
 2. until late
 3. until much after
 4. No substitution required

Question ID : 65497834907
Status : Not Attempted and Marked For Review
Chosen Option : --

Q.12 Select the most appropriate meaning of the given idiom.

A cold fish

- Ans 1. An unemotional person
 2. A nervous person
 3. A boring person
 4. A sensitive person

Question ID : 65497834898
Status : Answered
Chosen Option : 1

Q.13 Select the option that can be used as a one-word substitute for the given group of words.

A system of government in which most of the important decisions are taken by state officials rather than by elected representatives.

- Ans
- 1. Aristocracy
 - 2. Monarchy
 - 3. Democracy
 - 4. Bureaucracy

Question ID : 65497834903
Status : Answered
Chosen Option : 4

Q.14 Parts of the given sentence have been given as options. One of them contains a grammatical error. Select the option that has the error.

India has produce many well-known scientists who have received accolades all over the world.

- Ans
- 1. who have received
 - 2. India has produce
 - 3. well-known scientists
 - 4. all over the world

Question ID : 65497834900
Status : Answered
Chosen Option : 2

Q.15 Select the most appropriate synonym of the given word.

Coarse

- Ans
- 1. Happy
 - 2. Kind
 - 3. Polite
 - 4. Crude

Question ID : 65497834892
Status : Answered
Chosen Option : 4

Q.16 Select the option that can be used as a one-word substitute for the given group of words.

A building where monks live as a community

- Ans
- 1. Monastery
 - 2. Villa
 - 3. Cottage
 - 4. Condo

Question ID : 65497834894
Status : Answered
Chosen Option : 1

Q.17 Select the most appropriate meaning of the given idiom.

Vanish into thin air

- Ans 1. Dilute entirely
 2. Disappear completely
 3. Postpone finally
 4. Mix permanently

Question ID : 65497834893
Status : Answered
Chosen Option : 3

Q.18 Select the most appropriate ANTONYM of the given word.

Hearty

- Ans 1. Aloof
 2. Cordial
 3. Warm
 4. Robust

Question ID : 65497834896
Status : Not Answered
Chosen Option : --

Q.19 Select the most appropriate option to fill in the blank.

_____ of money prevented me from purchasing the house.

- Ans 1. Short
 2. Less
 3. Limit
 4. Lack

Question ID : 65497834899
Status : Answered
Chosen Option : 4

Q.20 The following sentence has been divided into parts. One of them may contain an error. Select the part that contains the error from the given options. If you don't find any error, select 'No error' as your answer.

I wants / to borrow your bicycle / for a day.

- Ans 1. for a day
 2. to borrow your bicycle
 3. No error
 4. I wants

Question ID : 65497834891
Status : Answered
Chosen Option : 4

Comprehension:

In the following passage, some words have been deleted. Read the passage carefully and select the most appropriate option to fill in each blank.

Jog Falls is one of the highest waterfalls in India. It is made by Sharavati river (1)_____ through the Western Ghats. It is surrounded (2)_____ a beautiful tropical forest. During summer, there is not (3)_____ water in the river but during monsoons, (4)_____ river is swollen with water and the Falls create a (5)_____ spectacle.

SubQuestion No : 21

Q.21 Select the most appropriate option to fill in blank no.1.

- Ans 1. flowed
 2. flow
 3. flowing
 4. flows

Question ID : 65497834912

Status : Answered

Chosen Option : 3

Comprehension:

In the following passage, some words have been deleted. Read the passage carefully and select the most appropriate option to fill in each blank.

Jog Falls is one of the highest waterfalls in India. It is made by Sharavati river (1)_____ through the Western Ghats. It is surrounded (2)_____ a beautiful tropical forest. During summer, there is not (3)_____ water in the river but during monsoons, (4)_____ river is swollen with water and the Falls create a (5)_____ spectacle.

SubQuestion No : 22

Q.22 Select the most appropriate option to fill in blank no.2.

- Ans 1. from
 2. by
 3. with
 4. through

Question ID : 65497834913

Status : Answered

Chosen Option : 2

Comprehension:

In the following passage, some words have been deleted. Read the passage carefully and select the most appropriate option to fill in each blank.

Jog Falls is one of the highest waterfalls in India. It is made by Sharavati river (1)_____ through the Western Ghats. It is surrounded (2)_____ a beautiful tropical forest. During summer, there is not (3)_____ water in the river but during monsoons, (4)_____ river is swollen with water and the Falls create a (5)_____ spectacle.

SubQuestion No : 23

Q.23 Select the most appropriate option to fill in blank no.3.

- Ans 1. many
 2. most
 3. more
 4. much

Question ID : 65497834914

Status : Answered

Chosen Option : 4

Comprehension:

In the following passage, some words have been deleted. Read the passage carefully and select the most appropriate option to fill in each blank.

Jog Falls is one of the highest waterfalls in India. It is made by Sharavati river (1)_____ through the Western Ghats. It is surrounded (2)_____ a beautiful tropical forest. During summer, there is not (3)_____ water in the river but during monsoons, (4)_____ river is swollen with water and the Falls create a (5)_____ spectacle.

SubQuestion No : 24

Q.24 Select the most appropriate option to fill in blank no.4.

- Ans 1. one
 2. the
 3. an
 4. a

Question ID : 65497834915

Status : Answered

Chosen Option : 2

Comprehension:

In the following passage, some words have been deleted. Read the passage carefully and select the most appropriate option to fill in each blank.

Jog Falls is one of the highest waterfalls in India. It is made by Sharavati river (1)_____ through the Western Ghats. It is surrounded (2)_____ a beautiful tropical forest. During summer, there is not (3)_____ water in the river but during monsoons, (4)_____ river is swollen with water and the Falls create a (5)_____ spectacle.

SubQuestion No : 25

Q.25 Select the most appropriate option to fill in blank no.5.

- Ans 1. different
 2. peculiar
 3. amazing
 4. fantastic

Question ID : 65497834916

Status : Answered

Chosen Option : 3

Section : Part D Hindi

Q.1 'पर्वत के ऊपर की समतल भूमि' वाक्यांश के लिए एक शब्द होगा-

- Ans 1. अधित्यका
 2. गिरि
 3. उपत्यका
 4. पठार

Question ID : 65497834935

Status : Not Answered

Chosen Option : --

Q.2 दिए गए शब्द का विलोम चुनें।

मौन

- Ans 1. चुप
 2. मौलिक
 3. वाचाल
 4. शात

Question ID : 65497834927
Status : Not Answered
Chosen Option : --

Q.3 दिए गए चार विकल्पों में से, उस विकल्प का चयन करें जो नीचे दिए मुहावरे का अर्थ व्यक्त करता है।

आँखों में धूल झोकना

- Ans 1. धोखा देना
 2. ढाढ़स बधाना
 3. आँख फोड़ना
 4. आदर देना

Question ID : 65497834928
Status : Not Answered
Chosen Option : --

Q.4 दिए गए शब्द के समानार्थी शब्द का चयन करें।

कमल

- Ans 1. अम्बुज
 2. कुसुमाकर
 3. सैन्धव
 4. कल्पतरु

Question ID : 65497834926
Status : Not Answered
Chosen Option : --

Q.5 'ताप' का विलोम शब्द होगा-

- Ans 1. उष्ण
 2. पाप
 3. शीत
 4. सताप

Question ID : 65497834934
Status : Not Answered
Chosen Option : --

Q.6 दिये गये वाक्य के किस भाग में त्रुटि है?

अभी ही वह यहाँ से बाहर गया है।

- Ans
- 1. वह यहाँ
 - 2. गया है।
 - 3. अभी ही
 - 4. से बाहर

Question ID : 65497834933
Status : Not Answered
Chosen Option : --

Q.7 रिक्त स्थान को भरने के लिए सबसे उपयुक्त शब्द का चयन करें।

मेरे पिताजी ने यह _____ लिखी है।

- Ans
- 1. नाटक
 - 2. कहानी
 - 3. उपन्यास
 - 4. सस्करण

Question ID : 65497834919
Status : Not Answered
Chosen Option : --

Q.8 दिए गए वाक्य में रेखांकित खंड को प्रतिस्थापित करने के लिए सबसे उपयुक्त विकल्प का चयन करें।
यदि इसे प्रतिस्थापित करने की आवश्यकता नहीं है, तो विकल्प 'किसी बदलाव की आवश्यकता नहीं है'
का चयन करें।

सतुष्ट होने के कारण उसने कभी शिकायत नहीं की।

- Ans
- 1. उसने कभी शिकायत नहीं करा।
 - 2. उसने कभी शिकायत नहीं किये।
 - 3. उसने कभी शिकायतें नहीं किये।
 - 4. किसी बदलाव की आवश्यकता नहीं है।

Question ID : 65497834936
Status : Not Answered
Chosen Option : --

Q.9 दिए गए वाक्य का वो भाग ज्ञात करें जिसमें कोई त्रुटि है। यदि कोई त्रुटि नहीं है, तो 'कोई त्रुटि नहीं है'
चुनें।

बिल के भुगतान (1)\ न करने पर तुम्हें (2)\ माल वापस करना होगा। (3)\ कोई त्रुटि नहीं है (4)

- Ans
- 1. 1
 - 2. 3
 - 3. 2
 - 4. 4

Question ID : 65497834922
Status : Not Answered
Chosen Option : --

Q.10 नीचे दिए वाक्यांश के लिए एक शब्द दिए गए विकल्पों में से चुनिए।

जिसका अपकार किया गया हो।

- Ans
- 1. उपकार
 - 2. अपकृत
 - 3. अपकार
 - 4. उपकृत

Question ID : 65497834929
Status : Not Answered
Chosen Option : --

Q.11 निम्नलिखित प्रश्न में, दिए गए चार विकल्पों में से, उस विकल्प का चयन करें जो मुहावरे का अर्थ व्यक्त करता है।

देवता कूच कर जाना

- Ans
- 1. दूर चले जाना
 - 2. घबरा जाना
 - 3. दुर्गति होना
 - 4. होश में न रहना

Question ID : 65497834924
Status : Not Answered
Chosen Option : --

Q.12 सही वर्तनी वाले शब्द का चयन करें।

- Ans
- 1. पूजनीय
 - 2. पुज्यनिय
 - 3. पुजनीय
 - 4. पूज्यनीय

Question ID : 65497834930
Status : Not Answered
Chosen Option : --

Q.13 दिए गए वाक्य में रेखांकित खंड को प्रतिस्थापित करने के लिए सबसे उपयुक्त विकल्प का चयन करें।
यदि इसे प्रतिस्थापित करने की आवश्यकता नहीं है, तो विकल्प 'किसी बदलाव की आवश्यकता नहीं है' का चयन करें।

उसका दुर्भाग्य था और इसलिए वह परीक्षा में बैठ न सके।

- Ans
- 1. इसलिए वह परीक्षा में बैठ न सका।
 - 2. इसलिए वह परीक्षा में बैठे न सका।
 - 3. इसलिए वह परीक्षाओं में बैठ न सके।
 - 4. किसी बदलाव की आवश्यकता नहीं है।

Question ID : 65497834921
Status : Not Answered
Chosen Option : --

Q.14 सही वर्तनी वाले शब्द का चयन करें।

- Ans 1. सौहार्द
 2. सौहार्द्र
 3. सोहाद्र
 4. सैहार्द

Question ID : 65497834931
Status : Not Answered
Chosen Option : --

Q.15 दिए गए वाक्य का वह भाग ज्ञात करें जिसमें कोई त्रुटि है। यदि कोई त्रुटि नहीं है, तो 'कोई त्रुटि नहीं है' चुनें।

पिताजी को (1)/ मुझे कुछ (2)/ रुपये दिये (3)/ कोई त्रुटि नहीं है (4)

- Ans 1. 3
 2. 4
 3. 2
 4. 1

Question ID : 65497834925
Status : Not Answered
Chosen Option : --

Q.16 रिक्त स्थान को भरने के लिए सबसे उपयुक्त शब्द का चयन कीजिए।

नई वस्तु की खोज को _____ कहते हैं।

- Ans 1. गवेषणा
 2. सशोधन
 3. खोज
 4. आविष्कार

Question ID : 65497834918
Status : Not Answered
Chosen Option : --

Q.17 इस वाक्यांश के लिए एक सार्थक शब्द दीजिए।

किसी पर विजय पाने की इच्छा रखने वाला

- Ans 1. जिज्ञासा
 2. जिगीषु
 3. जिजीविषा
 4. जिगीषा

Question ID : 65497834917
Status : Not Answered
Chosen Option : --

Q.18 दिए गए वाक्य में रेखांकित खंड को प्रतिस्थापित करने के लिए सबसे उपयुक्त विकल्प का चयन करें। यदि इसे प्रतिस्थापित करने की आवश्यकता नहीं है, तो विकल्प 'किसी बदलाव की आवश्यकता नहीं है' का चयन करें।

रावण वध के दिन अनेक लोग ने रामलीला देखी।

- Ans
- 1. अनेक लोगो ने रामलीला देखें।
 - 2. अनेक लोगो ने रामलीला देखी।
 - 3. अनेक लोग ने रामलीला देखा।
 - 4. किसी बदलाव की आवश्यकता नहीं है।

Question ID : 65497834920

Status : Not Answered

Chosen Option : --

Q.19 दिए गए शब्द के समानार्थी शब्द का चयन करें।

पुष्प

- Ans
- 1. जलजात
 - 2. परिमल
 - 3. प्रसून
 - 4. पल्लव

Question ID : 65497834923

Status : Not Answered

Chosen Option : --

Q.20 रिक्त स्थान को भरने के लिए सबसे उपयुक्त शब्द का चयन करें।

मैंने अपने भाई को _____ भेजा कि रविवार को हमसे मिलने आना।

- Ans
- 1. सवाद
 - 2. सदेश
 - 3. समाचार
 - 4. सूचना

Question ID : 65497834932

Status : Not Answered

Chosen Option : --

Comprehension:

श्रद्धा का मूल तत्व है- दूसरे का महत्व स्वीकार। अतः जिसकी (1) _____ दृष्टि अपने से आगे नहीं जा सकती अथवा (2) _____ के कारण जिन्हें अपनी ही बड़ाई के अनुभव की लत लग गई है उनकी इतनी समाई नहीं कि वे श्रद्धा ऐसे पवित्र भाव को (3) _____ करें। स्वार्थियो और अभिमानियो के (4) _____ में श्रद्धा नहीं टिक सकती। उनका अतःकरण सकुचित और (5) _____ होता है कि वह दूसरो के कृति का यथार्थ मूल्य नहीं परख सकते।

निम्न प्रश्नो के उत्तर उपरोक्त गद्यांश के आधार पर दीजिए।

SubQuestion No : 21

Q.21 गद्यांश के रिक्त स्थान (1) के लिए सर्वाधिक उपयुक्त शब्द होगा-

- Ans
- 1. परमार्थबद्ध
 - 2. मुक्त
 - 3. स्वार्थबद्ध
 - 4. विस्तृत

Question ID : 65497834938

Status : Not Answered

Chosen Option : --

Comprehension:

श्रद्धा का मूल तत्व है- दूसरे का महत्व स्वीकार। अतः जिसकी (1) _____ दृष्टि अपने से आगे नहीं जा सकती अथवा (2) _____ के कारण जिन्हें अपनी ही बड़ाई के अनुभव की लत लग गई है उनकी इतनी समाई नहीं कि वे श्रद्धा ऐसे पवित्र भाव को (3) _____ करें। स्वार्थियो और अभिमानियो के (4) _____ में श्रद्धा नहीं टिक सकती। उनका अतःकरण सकुचित और (5) _____ होता है कि वह दूसरो के कृति का यथार्थ मूल्य नहीं परख सकते।

निम्न प्रश्नो के उत्तर उपरोक्त गद्यांश के आधार पर दीजिए।

SubQuestion No : 22

Q.22 गद्यांश के रिक्त स्थान (2) के लिए सर्वाधिक उपयुक्त शब्द होगा-

- Ans
- 1. बलिदान
 - 2. सम्मान
 - 3. अपमान
 - 4. अभिमान

Question ID : 65497834939

Status : Not Answered

Chosen Option : --

Comprehension:

श्रद्धा का मूल तत्व है- दूसरे का महत्व स्वीकार। अतः जिसकी (1) _____ दृष्टि अपने से आगे नहीं जा सकती अथवा (2) _____ के कारण जिन्हें अपनी ही बड़ाई के अनुभव की लत लग गई है उनकी इतनी समाई नहीं कि वे श्रद्धा ऐसे पवित्र भाव को (3) _____ करें। स्वार्थियो और अभिमानियो के (4) _____ में श्रद्धा नहीं टिक सकती। उनका अतःकरण सकुचित और (5) _____ होता है कि वह दूसरो के कृति का यथार्थ मूल्य नहीं परख सकते।

निम्न प्रश्नो के उत्तर उपरोक्त गद्यांश के आधार पर दीजिए।

SubQuestion No : 23

Q.23 गद्यांश के रिक्त स्थान (3) के लिए सर्वाधिक उपयुक्त शब्द होगा-

- Ans
- 1. धारण
 - 2. चारण
 - 3. अनुकरण
 - 4. अनुसरण

Question ID : 65497834940

Status : Not Answered

Chosen Option : --

Comprehension:

श्रद्धा का मूल तत्व है- दूसरे का महत्व स्वीकार। अतः जिसकी (1) _____ दृष्टि अपने से आगे नहीं जा सकती अथवा (2) _____ के कारण जिन्हें अपनी ही बड़ाई के अनुभव की लत लग गई है उनकी इतनी समाई नहीं कि वे श्रद्धा ऐसे पवित्र भाव को (3) _____ करें। स्वार्थियो और अभिमानियो के (4) _____ में श्रद्धा नहीं टिक सकती। उनका अतःकरण सकुचित और (5) _____ होता है कि वह दूसरो के कृति का यथार्थ मूल्य नहीं परख सकते।

निम्न प्रश्नो के उत्तर उपरोक्त गद्यांश के आधार पर दीजिए।

SubQuestion No : 24

Q.24 गद्यांश के रिक्त स्थान (4) के लिए सर्वाधिक उपयुक्त शब्द होगा-

- Ans
- 1. बुद्धि
 - 2. शरीर
 - 3. हृदय
 - 4. मस्तिष्क

Question ID : 65497834941

Status : Not Answered

Chosen Option : --

Comprehension:

श्रद्धा का मूल तत्व है- दूसरे का महत्व स्वीकार। अतः जिसकी (1) _____ दृष्टि अपने से आगे नहीं जा सकती अथवा (2) _____ के कारण जिन्हें अपनी ही बड़ाई के अनुभव की लत लग गई है उनकी इतनी समाई नहीं कि वे श्रद्धा ऐसे पवित्र भाव को (3) _____ करें। स्वार्थियो और अभिमानियो के (4) _____ में श्रद्धा नहीं टिक सकती। उनका अतःकरण सकुचित और (5) _____ होता है कि वह दूसरो के कृति का यथार्थ मूल्य नहीं परख सकते।

निम्न प्रश्नो के उत्तर उपरोक्त गद्यांश के आधार पर दीजिए।

SubQuestion No : 25

Q.25 गद्यांश के रिक्त स्थान (5) के लिए सर्वाधिक उपयुक्त शब्द होगा-

- Ans
- 1. विस्तृत
 - 2. पवित्र
 - 3. धवल
 - 4. मलिन

Question ID : 65497834942

Status : Not Answered

Chosen Option : --