

Constable (GD) in CAPFs, NIA, SSF and Rifleman (GD) in Assam Rifles Examination, 2018

Roll No. :	
Registration No.	
Name :	
Exam Venue :	
Exam Time :	9:00 AM - 10:30 AM
Exam Date :	15/02/2019

Section : General Section

Q.1 Eight friends A, B, C, D, E, F, G and H are sitting around a circular table facing each other for a lunch. A is opposite D and third to the right of B. G is between A and F. H is to the right of A. E is between C and D. Who is sitting third to the right of H?

- Ans
- 1. F
 - 2. B
 - 3. D
 - 4. G

Question ID : 9895803398

Chosen Option : 2

Q.2

The statements below are followed by two conclusions labeled I and II. Assuming that the information in the statements is true, even if it appears at variance with generally established facts, decide which conclusion(s) logically and definitely follow(s) from the information given in the statements.

Statements:

- 1) Some rubies are garments.
- 2) Some garments are garnets.

Conclusion:

- I Some rubies are garnets.

- Ans
- 1. Only conclusion II follows.
 - 2. Only conclusion I follows.
 - 3. Both conclusions follow.
 - 4. Either conclusion I or conclusion II follows.

Question ID : 9895803401

Chosen Option : 3

Q.3

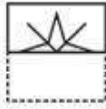
A square transparent sheet with a pattern is given. How will the pattern appear when the transparent sheet is folded along the dotted line?



Ans

x

✓ 1.



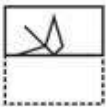
✗ 2.



✗ 3.



✗ 4.



Question ID : 9895803412
Chosen Option : 2

Q.4 Choose the option in which the figure marked 'X' is embedded. (Rotation is not allowed)




Ans

✗ 1.



✗ 2.



✓ 3.



✗ 4.



Question ID : 9895803410
Chosen Option : 2

Q.5 J, K, L, M, N and O are six teachers. Each one teaches a different subject out of Hindi, English, Math, Science, Social Science and Arts, not necessarily in the same order. Each of them teaches on only one day, from Monday to Saturday, not necessarily in the same order.

J teaches Science on Wednesday. O teaches Math second day after J. K teaches on the first day of the week, but teaches neither Hindi nor English. M teaches English before N and I teaches Arts before J. Which subject is taught between Thursday and Saturday?

Ans

✗ 1. English

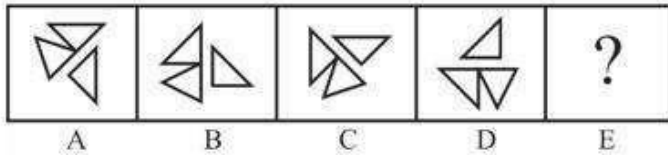
✓ 2. Math

✗ 3. Social Science

✗ 4. Science

Q.6 Choose the option that would follow next in the given figure series.

Problem Fig.



Ans

- ✓ 1.
- ✗ 2.
- ✗ 3.
- ✗ 4.

Q.7 Select the option that will correctly replace the question mark (?) in the series.

100, 96, 80, 44, ?

- Ans
- ✗ 1. 64
 - ✗ 2. 20
 - ✓ 3. -20
 - ✗ 4. 16

Q.8 Select the option that is related to the third term in the same way as the second term is related to the first term.

Artificial: Natural :: Answer: ?

- Ans
- ✓ 1. Question
 - ✗ 2. Reply
 - ✗ 3. Problem
 - ✗ 4. Solution

Question ID : 9895803392

Chosen Option : 4

Q.9 Choose the odd number out of the given options.

- Ans
- 1. 21
 - 2. 63
 - 3. 49
 - 4. 37

Question ID : 9895803405

Chosen Option : 3

Q.1₀ Choose the odd one out of the given options.

- Ans
- 1. Kidney
 - 2. Nose
 - 3. Liver
 - 4. Lungs

Question ID : 9895803391

Chosen Option : 2

Q.1₁ Seven friends O, P, Q, R, S, T and U are watching a movie sitting in a row. P is sitting at one extreme end. Q is sitting to the immediate left of S. P is sitting second to the right of T. U is not sitting at any extreme end. O is sitting between R and T. Who is sitting at the extreme right end?

- Ans
- 1. R
 - 2. Q
 - 3. T
 - 4. P

Question ID : 9895803397

Chosen Option : 3

Q.1₂ Select the option that is related to the third number in the same way as the second number is related to the first number.

45 : 405 :: 49 : ?

- Ans
- 1. 169
 - 2. 637
 - 3. 144
 - 4. 525

Question ID : 9895803404

Chosen Option : 2

Q.1₃ Choose the odd one out of the given options.

- Ans
- 1. PQH
 - 2. HJL

3. GJM

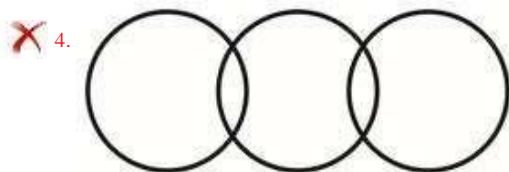
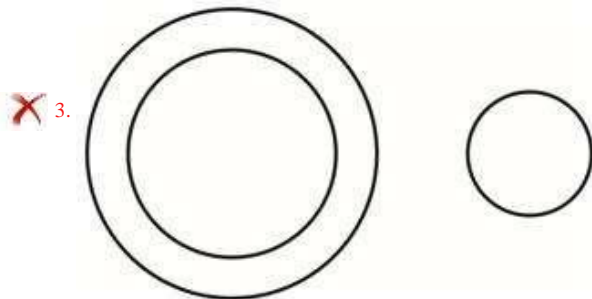
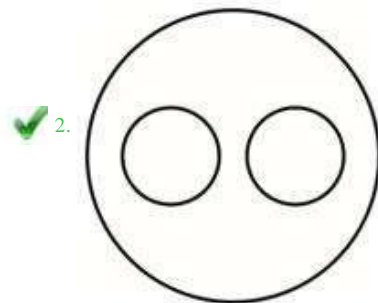
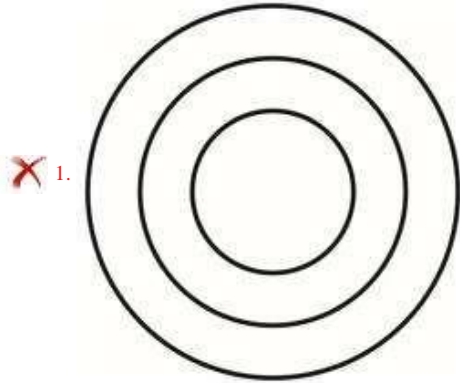
4. ELM

Question ID : 9895803390
Chosen Option : 1

Q.1
4 Select the Venn diagram that best represents the given set of classes.

Words, Synonyms, Antonymous

Ans



Question ID : 9895803413
Chosen Option : 2

Q.1
5 In a certain code, STEERING is written as HGVVIRMT. How will QUESTION be written in that code?

Ans 1. JFVHGILM

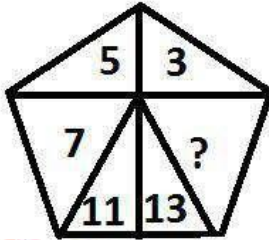
2. JFVHGRLM

3. JEVHGRLM

4. JFVHGRIM

Question ID : 9895803395
Chosen Option : 2

Q.1
6 Select the option that will correctly replace the question mark (?) in the given pattern.



- Ans 1. 16
 2. 19
 3. 9
 4. 11

Question ID : 9895803406
Chosen Option : 4

Q.1
7 Select the option that is related to the third term in the same way as the second term is related to the first term.

Famous : Renowned :: Fierce : ?

- Ans 1. Will
 2. Fear
 3. Desire
 4. Violent

Question ID : 9895803393
Chosen Option : 3

Q.1
8 Select the option that will correctly replace the question mark (?) in the series.

3, 15, 32, 59, ?

- Ans 1. 125
 2. 105
 3. 101
 4. 115

Question ID : 9895803403
Chosen Option : 3

Q.1
9

The statements below are followed by two conclusions labeled I and II. Assuming that the information in the statements is true, even if it appears at variance with generally established facts, decide which conclusion(s) logically and definitely follow(s) from the information given in the statements.

Statements:

- 1) All mustards are corns.
- 2) All corns are olives.

Conclusion:

- I All mustards are olives.
- II. Some olives are mustards.

- Ans
1. Only conclusion I follows.
 2. Both conclusions follow.
 3. Only conclusion II follows.
 4. Either conclusion I or conclusion II follows.

Question ID : 9895803400
Chosen Option : 3

Q.2
0 Select the option that will correctly replace the question mark (?) in the series.

PEL, NGK, LIJ, JKI, ?

- Ans
1. HMM
 2. HHM
 3. MHH
 4. MMH

Question ID : 9895803389
Chosen Option : 2

Q.2
1 Select the option that is related to the third term in the same way as the second term is related to the first term.

AC: BF:: JK: ?

- Ans
1. LM
 2. UT
 3. TU
 4. TV

Question ID : 9895803394
Chosen Option : 1

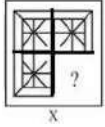
Q.2
2 Find out the two signs to be interchanged to make the following equation correct.

$$25 + 5 \times 7 - 12 \div 3 = 26$$

- Ans
1. + and \div
 2. + and \times
 3. - and \div
 4. + and -

Question ID : 9895803407
Chosen Option : 2

Q.2 Select a figure from amongst the four alternatives that when placed in the blank space (?) of figure X will complete the pattern. (Rotation is not allowed).



Ans

- 1.
- 2.
- 3.
- 4.

Question ID : 9895803409

Chosen Option : 1

Q.2 Choose the option that most closely resembles the mirror image of the given figure when mirror is placed at right side.



Ans

- 1.
- 2.
- 3.
- 4.

Question ID : 9895803411

Chosen Option : 2

Q.2 In a certain code, UP is written as 336. How will ATE be written in that code?

Ans 1. 20

2. 100

3. 80

4. 60

Question ID : 9895803396

Chosen Option : 3

Q.2
6 The tomb of Sher Shah Suri is situated in:

Ans 1. Sikandara

2. Burhanpur

3. Jabalpur

4. Sasaram

Question ID : 9895804953

Chosen Option : 1

Q.2
7 Which of the following cities is associated with the Kumbh Mela?

Ans 1. Meerut

2. Ujjain

3. Mathura

4. Varanasi

Question ID : 9895804954

Chosen Option : 4

Q.2
8 Which of the following Hindu shrines is recently declared as a National Heritage by the Government of Pakistan?

Ans 1. Katas Raj

2. Panj Tirath

3. Varun dev temple

4. Hinglaj Mata temple

Question ID : 9895804976

Chosen Option : 4

Q.2
9 Who is the winner of the Women's Singles Indonesian Masters Badminton tournament 2019?

Ans 1. Arundhati Pantawane

2. Shivani Gadde

3. Saina Nehwal

4. P. V. Sindhu

Question ID : 9895804965

Chosen Option : 3

Q.3

0 Choose the correct group of diseases that are spread by air:

- Ans
- 1. Cholera, Typhoid, Tuberculosis
 - 2. Tuberculosis, Pneumonia, Influenza
 - 3. Warts, common cold, cough
 - 4. AIDS, Typhoid, Pneumonia

Question ID : 9895804970
Chosen Option : 2

Q.3
1 Under which land revenue system, the zamindars were given the rights to transfer their properties subject to the payment of a fixed amount to the Government?

- Ans
- 1. Permanent Settlement
 - 2. Jagirdari Settlement
 - 3. Ryotwari Settlement
 - 4. Mahalwari Settlement

Question ID : 9895804958
Chosen Option : 2

Q.3
2 Which of the following features of the Organised sector is NOT correct?

- Ans
- 1.
The enterprises under this sector are registered with the Government.
 - 2. Workers get paid leaves during the holidays.
 - 3. Workers under this sector enjoy security and employment.
 - 4.
The employers are bound to provide leave travel concession to its workers.

Question ID : 9895804968
Chosen Option : 2

Q.3
3 In the context of temple architecture, the most important part of the temple is:

- Ans
- 1. Gopuram
 - 2. Mandapam
 - 3. Pradakshina Patha
 - 4. Garbhagriha

Question ID : 9895804957
Chosen Option : 1

Q.3
4 In which of the following protected areas in India the human interference is prohibited?

- Ans
- 1. National Parks
 - 2. Wetlands

- 3. Wildlife sanctuaries
- 4. Biosphere Reserves

Question ID : 9895804964
Chosen Option : 4

Q.3
5 The Zaskar, the Hunza and the Nubra are the tributaries of:

- Ans
- 1. Indus
 - 2. Tapi
 - 3. Brahmaputra
 - 4. Godavari

Question ID : 9895804962
Chosen Option : 1

Q.3
6 Which of the following statements is NOT correct about the culture of Maharashtra?

- Ans
- 1. Its popular dance is called 'Gotipua'.
 - 2. Ganesh Chaturthi is its main festival.
 - 3. Its folk theatre is called Tamasha.
 - 4. Its traditional saree is called Paithani.

Question ID : 9895804955
Chosen Option : 3

Q.3
7 Who among the following is invited as the chief guest at the 2019 Republic Day of India?

- Ans
- 1. President of South Africa
 - 2. President of Sri Lanka
 - 3. Prime Minister of Japan
 - 4. President of Nepal

Question ID : 9895804975
Chosen Option : 1

Q.3
8 The plastics which get deformed easily on heating are known as:

- Ans
- 1. Thermosetting Plastics
 - 2. Thermo Plastics
 - 3. Thermo resistant Plastics
 - 4. Thermodynamic Plastics

Question ID : 9895804971
Chosen Option : 3

Q.3
9

- Ans
- 1. The local wind “Loo” blows here.
 - 2. The annual rainfall is very heavy.
 - 3. There is a North South wind barrier.
 - 4.

It has the continental type of climate with extreme temperatures.

Question ID : 9895804963
Chosen Option : 4

Q.4
0 The dispute between two states can be resolved by the Supreme Court of India under its:

- Ans
- 1. Appellate Jurisdiction
 - 2. Advisory Jurisdiction
 - 3. Supervisory Jurisdiction
 - 4. Original Jurisdiction

Question ID : 9895804959
Chosen Option : 1

Q.4
1 What will happen to the boiling point and freezing point of water when some common salt is added in it?

- Ans
- 1. Boiling point elevation, freezing point depression
 - 2. No change
 - 3. Only boiling point increases or decreases
 - 4. Boiling point depression, freezing point elevation

Question ID : 9895804974
Chosen Option : 1

Q.4
2 Special Economic Zones are being set up by the Government in order to attract:

- Ans
- 1. Traditional artisans
 - 2. Cooperative companies
 - 3. Foreign companies
 - 4. Local companies

Question ID : 9895804969
Chosen Option : 4

Q.4
3 The B.P. Mandal commission was set up to study the reasons of backwardness of the:

- Ans
- 1. scheduled tribes
 - 2. scheduled castes
 - 3.
 - 4. socially and economically backward classes

Q.4
4

Question ID : 9895804961

- Ans
- 1. convex
 - 2. concave
 - 3. parabolic lenses used to cure Myopia?
 - 4. cylindrical

Question ID : 9895804973

Chosen Option : 4

Q.4 Who among the following rulers is related to "market regulatory measures" in medieval India?

5

Ans

- 1. Alauddin Khilji
- 2. Sher Shah Suri
- 3. Muhammed Bin Tughlaq
- 4. Jahangir

Question ID : 9895804956

Chosen Option : 1

Q.4
6

- Ans
- 1. National Income
 - 2. Total Income
 - 3. Intermediate Income
 - 4. Average Income
- ita Income is:

Question ID : 9895804967

Chosen Option : 4

Q.4
7

- Ans
- 1. Government of Indian Act 1935
 - 2. Government of Indian Act 1909
 - 3. Government of Indian Act 1947
 - 4. Government of Indian Act 1919
- Dyarchy was introduced in India?

Question ID : 9895804960

Chosen Option : 4

Q.4 In 2016 Rio Olympics, Indian gymnast Dipa Kamakar attempted the most dangerous vault known as:

8

Ans

- 1. Yurchenko
- 2.

Rudi

3. Tsukahara

4. Produnova

Question ID : 9895804966
Chosen Option : 4

Q.4
9 Napthaline ball disappears after some days due to the process of:

Ans 1. sublimation

2. melting and evaporation

3. melting

4. evaporation

Question ID : 9895804972
Chosen Option : 2

Q.5
0 The recent largest ever coastal defence exercise is conducted by the Indian Navy is named as:

Ans 1. SEA SERPENT

2. SEA HAWK

3. SEA SEIZURE

4. SEA VIGIL

Question ID : 9895804977
Chosen Option : 1

Q.5
1 A sum of ₹10000 is lent on simple interest at the rate of 15% per annum. What is the difference between Simple interest for 6 years and the simple interest for 2 years?

Ans 1. ₹4000

2. ₹8000

3. ₹6000

4. ₹4500

Question ID : 9895805066
Chosen Option : 4

Q.5
2 What is the mean of the given data?

2, 3, 4, 5, 6, 7, 8, 9

Ans 1. 4

2. 4.5

3. 5.5

4. 5

Question ID : 9895805059
Chosen Option : 2

3 A train is moving with a uniform speed. Train crosses a bridge of length 243 meters in 30 seconds and a bridge of length 343 meters in 36 seconds. What is the speed of the train?

- Ans 1. 60 km/hr
 2. 72 km/hr
 3. 64 km/hr
 4. 65 km/hr

Question ID : 9895805070
Chosen Option : 2

Q.5 The area of a square and a rectangle are equal. The length of the rectangle is greater than the side of square by 9 cm and its breadth is less than the side of square by 6 cm. What will be the perimeter of the rectangle?

- Ans 1. 84 cm
 2. 74 cm
 3. 78 cm
 4. 76 cm

Question ID : 9895805073
Chosen Option : 2

Q.5 A car covers a certain distance at a speed of 54 km/hr in 7 hours. What should be the speed of car to cover the same distance in 6 hours?

- Ans 1. 72 km/hr
 2. 56 km/hr
 3. 63 km/hr
 4. 54 km/hr

Question ID : 9895805071
Chosen Option : 3

Q.5 The curved surface area of a cone is 550 cm^2 . If the area of its base is 154 cm^2 , then what will be the volume of the cone?

- Ans 1. 2464 cm^3
 2. 1836 cm^3
 3. 1232 cm^3
 4. 1472 cm^3

Question ID : 9895805074
Chosen Option : 3

Q.5 The table given below shows the marks obtained by 4 students in 5 subjects. The maximum marks of each subject is 100.

Subjects	Students			
	P1	P2	P3	P4
S1	89	100	92	91
S2	62	52	72	37
S3	57	55	70	65
S4	76	85	76	58
S5	85	70	66	62

What is the total percent marks of P4?

- Ans 1.

2. 59.5%

3. 62.6%

4. 65.8%

Question ID : 9895805075

Chosen Option : 1

Q.5
8 What is the value of $(14 \div 49 - 3 \div \frac{7}{2})$ of 5)?

Ans 1. 17/35

2. 4/35

3. 6/35

4. 7/35

Question ID : 9895805055

Chosen Option : 3

Q.5
9 The product of two numbers is 720. If their Least Common Multiple is 360, then what will be the Highest common Factor of these two numbers?

Ans 1. 60

2. 20

3. 120

4. 2

Question ID : 9895805053

Chosen Option : 1

Q.6
0 A person buys 25 kg of rice for ₹600 and sells them at a loss equal to the selling price of 5 kg rice. What will be the loss percentage?

Ans 1. 14.28%

2. 16.66%

3. 25%

4. 20%

Question ID : 9895805062

Chosen Option : 3

Q.6
1 Height of a right circular cylinder is 12 cm. If the radius is its base 21 cm, then what will be the curved surface area of the cylinder?

Ans 1. 1544 cm²

2. 1584 cm²

3. 1456 cm²

4. 1632 cm²

Question ID : 9895805072

Chosen Option : 3

Q.6 What is the value of $24 - [48 \div \{48 \times (48 \div (24 \times 24))\}]$?

- Ans
- 1. 16
 - 2. 12
 - 3. 18
 - 4. 20

Question ID : 9895805054

Chosen Option : 2

Q.6 If $X/3 = Y/5 = Z/9$, then what is the ratio of $X : Y : Z$?

- Ans
- 1. 9 : 5 : 6
 - 2. 3 : 5 : 6
 - 3. 15 : 9 : 5
 - 4. 3 : 5 : 9

Question ID : 9895805065

Chosen Option : 4

Q.6 Pipe X can fill a tank in 12 hours and pipe Y can fill the same tank in 36 hours. In how many hours both pipe X and pipe Y together can fill one-third part of the tank?

- Ans
- 1. 9 hours
 - 2. 3 hours
 - 3. 15 hours
 - 4. 27 hours

Question ID : 9895805068

Chosen Option : 3

Q.6 Average marks of 15 students of class first is 160. Average marks of 10 students of class second is 120. Average marks of 15 students of class third is 180. What will be the average marks of students of all the classes together?

- Ans
- 1. 157.5
 - 2. 162.5
 - 3. 155.5
 - 4. 167.5

Question ID : 9895805057

Chosen Option : 2

Q.6 A person purchases 36 articles for ₹360. How many articles must he sold for ₹360, so that the profit is 50%?

- Ans
- 1. 18
 - 2. 36
 - 3. 24
 - 4. 32

Question ID : 9895805061

Chosen Option : 2

Q.6 *A, B and C invest ₹14000, ₹18000 and ₹24000 respectively to start a business. If the profit at the end of the year is ₹25480, then what is total share of A and B?*

- Ans 1. ₹6370
 2. ₹14560
 3. ₹17290
 4. ₹19110

Question ID : 9895805064
Chosen Option : 3

Q.6 *If S is 160% of T, then T will be what percent of S?*

- Ans 1. 85%
 2. 62.50%
 3. 65.20%
 4. 70%

Question ID : 9895805060
Chosen Option : 1

Q.6 *The table given below shows the production of rice and the area under rice cultivation of a country for 5 consecutive years Y1, Y2, Y3, Y4 and Y5.*

Year	Rice Production (in 1000 kg)	Area Under Rice Cultivation (in 100 square meter)
Y1	520	130
Y2	570	190
Y3	680	150
Y4	720	180
Y5	850	170

What is the percentage change in the yield per square meter of Y5 as compared to Y1?

- Ans 1. 33.33%
 2. 25%
 3. 20%
 4. 37.5%

Question ID : 9895805077
Chosen Option : 2

Q.7 *The table given below shows the production of rice and the area under rice cultivation of a country for 5 consecutive years Y1, Y2, Y3, Y4 and Y5.*

Year	Rice Production (in 1000 kg)
Y1	520
Y2	570
Y3	680
Y4	720
Y5	850

What is the per year average production of rice?

- Ans 1. 702000 kg
 2. 644000 kg
 3. 686000 kg
 4. 668000 kg

Question ID : 9895805076

Chosen Option : 2

Q.7
1 The ratio of two numbers is 14 : 25. If the difference between them is 264, then which is the smaller of the two numbers?

- Ans
- 1. 316
 - 2. 294
 - 3. 336
 - 4. 282

Question ID : 9895805063
Chosen Option : 3

Q.7
2 What will be the average of 16, 17, 18, upto fifteen terms?

- Ans
- 1. 23.5
 - 2. 23
 - 3. 26
 - 4. 24

Question ID : 9895805056
Chosen Option : 1

Q.7
3 40 persons can repair a bridge in 12 days. If 8 more persons join them, then in how many days bridge can be repaired?

- Ans
- 1. 11 days
 - 2. 10 days
 - 3. 9 days
 - 4. 8 days

Question ID : 9895805069
Chosen Option : 3

Q.7
4 A sum of ₹14000 is lent at compound interest (interest is compounded annually) for 3 years. If the rate of interest is 10%, then what will be the compound interest?

- Ans
- 1. ₹4,634
 - 2. ₹4,645
 - 3. ₹4,364
 - 4. ₹4,643

Question ID : 9895805067
Chosen Option : 2

Q.7
5 The ratio of the marked price and the cost price of a pen is 3 : 2 while the ratio of marked price and selling price is 5 : 4. What is the profit percentage?

- Ans
- 1. 20%
 - 2. 24%
 - 3. 25%





 4. 16%

Question ID : 9895805058
Chosen Option : 4

Section : English Language

Q.1 Select the option that means the same as the given idiom.


To keep someone at arm's length.

- Ans  1. To avoid someone
 2. To be near someone
 3. To disturb someone
 4. To love someone

Question ID : 9895804533
Chosen Option : 4

Q.2 Select the most appropriate word to fill in the blank.





You must _____ hard to get the best deal.

- Ans  1. navigate
 2. neglect
 3. negate
 4. negotiate

Question ID : 9895804539
Chosen Option : 1

Q.3 Select the most appropriate option to substitute the underlined segment in the given sentence. If there is no need to substitute it, select No Improvement.

The work on two projects are already going on which will connect Leh-Ladakh by railway line and air.

- Ans  1. No improvement.
 2. is already going on
 3. is already go on
 4. is already going up

Question ID : 9895804518
Chosen Option : 3

Q.4

Select the word which means the same as the group of words given.

One who feeds on human flesh

- Ans
- 1. Cannibal
 - 2. Omnivorous
 - 3. Vegan
 - 4. Carnivorous

Question ID : 9895804535
Chosen Option : 4

Q.5 Select the correctly spelt word.

- Ans
- 1. Apelling
 - 2. Appeeling
 - 3. Appeling
 - 4. Appealing

Question ID : 9895804536
Chosen Option : 3

Q.6 Select the word which means the same as the group of words given.

One who makes an official examination of accounts

- Ans
- 1. Controller
 - 2. Supervisor
 - 3. Auditor
 - 4. Officer

Question ID : 9895804873
Chosen Option : 3

Q.7 Select the synonym of the given word.

Forsake

- Ans
- 1. Accept
 - 2. Adopt
 - 3. Adapt
 - 4. Abandon

Question ID : 9895804528
Chosen Option : 1

Q.8 From the given options, identify the segment in the sentence which contains the grammatical error.

I would rather to go home than go to a restaurant for dinner.

- Ans
- 1. than go to
 - 2. I would
 - 3. for dinner.
 - 4. rather to go

Question ID : 9895804516
Chosen Option : 4

Q.9 Select the most appropriate word to fill in the blank.

The adventurer in him cannot _____ the call of the mountains.

- Ans
- 1. respond
 - 2. resist
 - 3. restrain
 - 4. restore

Question ID : 9895804538
Chosen Option : 4

Q.1
0 From the given options, identify the segment in the sentence which contains the grammatical error.

It is a fact that you are known by me.

- Ans
- 1. by me.
 - 2. you are known
 - 3. a fact
 - 4. It is

Question ID : 9895804515
Chosen Option : 3

Q.1
1 Select the synonym of the given word.

Favoured

- Ans
- 1. Rejected
 - 2. Preferred
 - 3. Neglected
 - 4. Trusted

Question ID : 9895804529

Q.1 Select the most appropriate option to substitute the underlined segment in the given sentence. If there is no need to substitute it, select No improvement.

Even children shrink away from food thinking that they should become overweight.

- Ans
- 1. No improvement.
 - 2. are become
 - 3. were become
 - 4. might become

Question ID : 9895804519
Chosen Option : 2

Q.1 Select the most appropriate option to fill in the blank.

 many cooks spoil the broth.

- Ans
- 1. So
 - 2. A few
 - 3. Too
 - 4. Few

Question ID : 9895804520
Chosen Option : 1

Q.1 Select the correctly spelt word.

- Ans
- 1. Mischeivous
 - 2. Mischieveous
 - 3. Mischievius
 - 4. Mischievous

Question ID : 9895804537
Chosen Option : 3

Q.1 Select the most appropriate option to substitute the underlined segment in the given sentence. If there is no need to substitute it, select No improvement.

You will be needing to complete all the pending work before it becomes unmanageable.

- Ans
- 1. No improvement.
 - 2. would be needing
 - 3. will be needed
 - 4. will need

Question ID : 9895804517
Chosen Option : 3

Q.1
6 Select the antonym of the given word.

Peculiar

- Ans 1. Usual
 2. Quiet
 3. Strange
 4. Sacred

Question ID : 9895804531
Chosen Option : 2

Q.1
7 Select the option that means the same as the given idiom.

To be at home.

- Ans 1. To be at ease
 2. To be casual
 3. To be formal
 4. To be perplexed

Question ID : 9895804532
Chosen Option : 4

Q.1
8 From the given options, identify the segment in the sentence which contains the grammatical error.

Ritesh is best than many other boys in his class.

- Ans 1. than many
 2. in the class.
 3. other boys
 4. Ritesh is best

Question ID : 9895804514
Chosen Option : 2

Comprehension:

SubQuestion No : 19

Q.1
9 Select the most appropriate option that will fill in the blank number 1.

- Ans
- 1. they
 - 2. it
 - 3. he
 - 4. she

Question ID : 9895804523
Chosen Option : 1

Comprehension:

In the following passage some words have been deleted. Fill in the blanks with the help of the alternatives given.

The last one in this long procession of silent men and women was a thin old man. Even (1) _____ carried a load of two baskets, slung on a pole on his (2) _____. In one basket there were (3) _____ pots. The other basket it seemed there was a quilt, extremely (4) _____ and patched, but clean still. (5) _____ the load was light, it was too much for the old man.

SubQuestion No : 20

Q.2
0 Select the most appropriate option that will fill in the blank number 2.

- Ans
- 1. head
 - 2. neck
 - 3. hand
 - 4. shoulder

Question ID : 9895804524
Chosen Option : 3

Comprehension:

In the following passage some words have been deleted. Fill in the blanks with the help of the alternatives given.

The last one in this long procession of silent men and women was a thin old man. Even (1) _____ carried a load of two baskets, slung on a pole on his (2) _____. In one basket there were (3) _____ pots. The other basket it seemed there was a quilt, extremely (4) _____ and patched, but clean still. (5) _____ the load was light, it was too much for the old man.

SubQuestion No : 21

Q.2
1 Select the most appropriate option that will fill in the blank number 3.

- Ans 1. one
 2. some
 3. any
 4. none

Question ID : 9895804525
Chosen Option : 1

Comprehension:

In the following passage some words have been deleted. Fill in the blanks with the help of the alternatives given.

The last one in this long procession of silent men and women was a thin old man. Even (1) _____ carried a load of two baskets, slung on a pole on his (2) _____. In one basket there were (3) _____ pots. The other basket it seemed there was a quilt, extremely (4) _____ and patched, but clean still. (5) _____ the load was light, it was too much for the old man.

SubQuestion No : 22

Q.2
2 Select the most appropriate option that will fill in the blank number 4.

- Ans 1. ragged
 2. beautiful
 3. shining
 4. new

Question ID : 9895804526
Chosen Option : 1

Comprehension:

In the following passage some words have been deleted. Fill in the blanks with the help of the alternatives given.

The last one in this long procession of silent men and women was a thin old man. Even (1) _____ carried a load of two baskets, slung on a pole on his (2) _____. In one basket there were (3) _____ pots. The other basket it seemed there was a quilt, extremely (4) _____ and patched, but clean still. (5) _____ the load was light, it was too much for the old man.

SubQuestion No : 23

Q.2
3 Select the most appropriate option that will fill in the blank number 5.

- Ans 1. Although
 2. Because
 3. Since

4. But

Question ID : 9895804527
Chosen Option : 4

Q.2
4 Select the antonym of the given word.

Ruthless

- Ans
- 1. Humble
 - 2. Merciless
 - 3. Careful
 - 4. Kind

Question ID : 9895804530
Chosen Option : 1

Q.2
5 Select the most appropriate option to fill in the blank.

All good things _____ come to an end

- Ans
- 1. must
 - 2. ought
 - 3. shall not
 - 4. have not

Question ID : 9895804521
Chosen Option : 1

Section : Hindi Language

Q.1 दिए गए वाक्य में रेखांकित खंड को प्रतिस्थापित करने के लिए उपयुक्त विकल्प का चयन करें।

लड़का अपने गाँव गया और वहाँ आकर अपने मित्रों से मिला।

- Ans
- 1. वहाँ जाकर अपने मित्रों से
 - 2. वहाँ जाकर अपना मित्रों से
 - 3. यहाँ जाकर अपने मित्रों से
 - 4. यहाँ आकर अपने मित्रों से

Question ID : 9895804082
Chosen Option : --

Q.2 दिए गए वाक्य का वह भाग ज्ञात करें जिसमें कोई त्रुटि है।

संगीत मंडली मिलकर मंच में गीत गा रही है।

- Ans
- 1. मिलकर
 - 2. संगीत मंडली
 - 3. मंच में
 - 4. गीत गा रही है।

Question ID : 9895804079
Chosen Option : --

Q.3 दिए गए शब्द के पर्यायवाची शब्द का चयन करें।

अनुचर

- Ans
- 1. सेवक
 - 2. रुचिर
 - 3. मालिक
 - 4. भास्कर

Question ID : 9895804098
Chosen Option : --

Q.4 दिये गये वाक्यांश के लिए एक शब्द दीजिये।

साथ पढ़ने वाला

- Ans
- 1. साथी
 - 2. सहपढ़
 - 3. सहपाठी
 - 4. सहयोगी

Question ID : 9895804101
Chosen Option : --

Q.5 दिए गए शब्द के पर्यायवाची शब्द का चयन करें।

स्नेह

- Ans
- 1. घृणा
 - 2. प्रेम

3. लता
 4. व्यथा

Question ID : 9895804097
Chosen Option : --

Q.6 निम्नलिखित में से उस विकल्प का चयन करें जो 'चादर देखकर पाँव फैलाना' मुहावरे का अर्थ व्यक्त करता है।

- Ans 1. व्यय अधिक आय कम होना
 2. चादर पर पैर फैलाकर सोना
3. आय के अनुसार व्यय करना
 4. चादर देखकर सो जाना

Question ID : 9895804099
Chosen Option : --

Q.7 दिए गए वाक्य का वह भाग ज्ञात करें जिसमें कोई त्रुटि है।

विद्यालयों में भी सूचना हेतु एक विशेष स्थानों होता है।

- Ans 1. एक विशेष
2. विद्यालयों में भी
 3. स्थानों होता है।
4. सूचना हेतु

Question ID : 9895804080
Chosen Option : --

Q.8 दिए गए वाक्य में रेखांकित खंड को प्रतिस्थापित करने के लिए सबसे उपयुक्त विकल्प का चयन करें।

भोजन की थाली पकवानों से सजा होती है तभी खाने में आनंद आता है।

- Ans 1. पकवानों से सजी होती है
 2. पकवानों से सजी होते हैं
 3. पकवानों से सजा होता है
 4. पकवानों से सजी होता है

Question ID : 9895804083
Chosen Option : --

Q.9

दिए गए वाक्य का वह भाग ज्ञात करें जिसमें कोई त्रुटि है।

पारिवारिक अदालतों के निर्णय टूटते हुए परिवार का शांति को नया जीवन प्रदान कर सकते हैं।

Ans

1. प्रदान कर सकते हैं।
- ✓ 2. पारिवारिक अदालतों के निर्णय
- ✗ 3. शांति को नया जीवन
4. टूटते हुए परिवार का

Question ID : 9895804081

Chosen Option : --

Q.1 रिक्त स्थान को भरने के लिए उपयुक्त शब्द का चयन करें।

आजकल परिवार में _____ बढ़ रही है।

Ans

- ✗ 1. चरित्र
- ✓ 2. धन
- ✗ 3. प्रेम
4. दूरियाँ

Question ID : 9895804085

Chosen Option : --

Q.1 रिक्त स्थान को भरने के लिए उपयुक्त शब्द का चयन करें।

मैं अवधी भाषा _____ सकता हूँ।

Ans

- ✗ 1. खरीद
- ✗ 2. समझ
- ✓ 3. देख
- ✗ 4. छू

Question ID : 9895804088

Chosen Option : --

Q.1 सही वर्तनी वाले शब्द का चयन करें।

Ans

- ✗ 1. अधीर
- ✗ 2. आधीर

✓ 3. अधिर

✗ 4. आधिर

Question ID : 9895804104
Chosen Option : --

Q.1
3 दिए गए शब्द का विलोम चुनें।

मोक्ष

Ans ✗ 1. छुटकारा

✗ 2. स्वर्ग

✓ 3. बंधन

✗ 4. दुतकार

Question ID : 9895804095
Chosen Option : --

Q.1
4 रिक्त स्थान को भरने के लिए उपयुक्त शब्द का चयन करें।

प्रतिदिन आपराधिक _____ बढ़ते जा रहे हैं।

Ans ✗ 1. पक्षी

✓ 2. कर्म

✗ 3. खाद्य

✗ 4. गान

Question ID : 9895804087
Chosen Option : --

Q.1
5 दिए गए शब्द का विलोम चुनें।

गद्य

Ans ✗ 1. नाटक

✓ 2. अंक

✗ 3. एंकाकी

✗ 4. पद्य

Question ID : 9895804096
Chosen Option : --

Q.1
6

दिये गये वाक्यांश के लिए एक शब्द दीजिये।

जो भविष्य में आने वाला हो

- Ans
- 1. आगामी
 - 2. भूतकाल
 - 3. अकाल
 - 4. परागामी

Question ID : 9895804102
Chosen Option : --

Q.1 रिक्त स्थान को भरने के लिए उपयुक्त शब्द का चयन करें।

दाना चुगकर पक्षी ने _____ उड़ान भरी।

- Ans
- 1. लंबी
 - 2. छोटा
 - 3. गहरी
 - 4. लंबा

Question ID : 9895804086
Chosen Option : --

Q.1 दिए गए वाक्य में रेखांकित खंड को प्रतिस्थापित करने के लिए सबसे उपयुक्त विकल्प का चयन करें।

हिरण्यकश्यप अत्यंत अभिमानी था और वह स्वयं से भगवान मानता था।

- Ans
- 1. वह स्वयं में भगवान मानता था।
 - 2. वह स्वयं पर भगवान मानता था।
 - 3. वह स्वयं को भगवान मानता था।
 - 4. वह स्वयं ने भगवान मानता था।

Question ID : 9895804084
Chosen Option : --

Q.1 निम्नलिखित में से उस विकल्प का चयन करें जो 'चुल्लू भर पानी में डूब मरना' मुहावरे का अर्थ व्यक्त करता है।

- Ans
- 1. कायर बनना
 - 2. चुल्लू में पानी भरकर डूब जाना
 - 3. बेशर्म होना

✗ 4. शर्मिदा होना

Question ID : 9895804100

Chosen Option : --

Comprehension:

दिए गए अनुच्छेद में कुछ शब्द हटा दिए गए हैं। दिए गए विकल्पों की सहायता से रिक्त स्थान भरें। प्रत्येक संख्या के लिए उपयुक्त विकल्प का चयन करें।

भाग्य और पुरुषार्थ एक ही _____ (1) के दो पहलू हैं। मनुष्य पुरुषार्थी है तो वह _____ (2) होगा। जब हम इस संसार में आए हैं तो _____ (3) करना ही पड़ेगा। संसार की बाधाओं एवं समस्याओं से _____ (4) करके अपना _____ (5) खोजना होगा तभी विजयश्री हमारे हिस्से में आएगी।

SubQuestion No : 20

Q.2
0 गद्यांश में संकेतित रिक्त स्थान (1) के लिए उपयुक्त शब्द होगा

- Ans
- ✗ 1. शीशे
 - ✓ 2. सिक्के
 - ✗ 3. बरतन
 - ✗ 4. कपड़े

Question ID : 9895804090

Chosen Option : --

Comprehension:

दिए गए अनुच्छेद में कुछ शब्द हटा दिए गए हैं। दिए गए विकल्पों की सहायता से रिक्त स्थान भरें। प्रत्येक संख्या के लिए उपयुक्त विकल्प का चयन करें।

भाग्य और पुरुषार्थ एक ही _____ (1) के दो पहलू हैं। मनुष्य पुरुषार्थी है तो वह _____ (2) होगा। जब हम इस संसार में आए हैं तो _____ (3) करना ही पड़ेगा। संसार की बाधाओं एवं समस्याओं से _____ (4) करके अपना _____ (5) खोजना होगा तभी विजयश्री हमारे हिस्से में आएगी।

SubQuestion No : 21

Q.2
1 गद्यांश में संकेतित रिक्त स्थान (2) के लिए उपयुक्त शब्द होगा

- Ans
- ✗ 1. भाग्यशाली
 - 2. दुखी

✓ 3. भाग्यहीन

✗ 4. आलसी

Question ID : 9895804091

Chosen Option : --

Comprehension:

दिए गए अनुच्छेद में कुछ शब्द हटा दिए गए हैं। दिए गए विकल्पों की सहायता से रिक्त स्थान भरें। प्रत्येक संख्या के लिए उपयुक्त विकल्प का चयन करें।

भाग्य और पुरुषार्थ एक ही _____ (1) के दो पहलू हैं। मनुष्य पुरुषार्थी है तो वह _____ (2) होगा। जब हम इस संसार में आए हैं तो _____ (3) करना ही पड़ेगा। संसार की बाधाओं एवं समस्याओं से _____ (4) करके अपना _____ (5) खोजना होगा तभी विजयश्री हमारे हिस्से में आएगी।

SubQuestion No : 22

Q.2
2 गद्यांश में संकेतित रिक्त स्थान (3) के लिए उपयुक्त शब्द होगा

Ans ✗ 1. कर्म

✗ 2. सोना

✓ 3. घूमना

✗ 4. भागना

Question ID : 9895804092

Chosen Option : --

Comprehension:

दिए गए अनुच्छेद में कुछ शब्द हटा दिए गए हैं। दिए गए विकल्पों की सहायता से रिक्त स्थान भरें। प्रत्येक संख्या के लिए उपयुक्त विकल्प का चयन करें।

भाग्य और पुरुषार्थ एक ही _____ (1) के दो पहलू हैं। मनुष्य पुरुषार्थी है तो वह _____ (2) होगा। जब हम इस संसार में आए हैं तो _____ (3) करना ही पड़ेगा। संसार की बाधाओं एवं समस्याओं से _____ (4) करके अपना _____ (5) खोजना होगा तभी विजयश्री हमारे हिस्से में आएगी।

SubQuestion No : 23

Q.2
3 गद्यांश में संकेतित रिक्त स्थान (4) के लिए उपयुक्त शब्द होगा

Ans ✗ 1. संघर्ष

✗ 2. नौकरी

- ✓ 3. भाग्य
4. दुनिया

Question ID : 9895804093
Chosen Option : --

Comprehension:

दिए गए अनुच्छेद में कुछ शब्द हटा दिए गए हैं। दिए गए विकल्पों की सहायता से रिक्त स्थान भरें। प्रत्येक संख्या के लिए उपयुक्त विकल्प का चयन करें।

भाग्य और पुरुषार्थ एक ही _____ (1) के दो पहलू हैं। मनुष्य पुरुषार्थी है तो वह _____ (2) होगा। जब हम इस संसार में आए हैं तो _____ (3) करना ही पड़ेगा। संसार की बाधाओं एवं समस्याओं से _____ (4) करके अपना _____ (5) खोजना होगा तभी विजयश्री हमारे हिस्से में आएगी।

SubQuestion No : 24

Q.2
4 गद्यांश में संकेतित रिक्त स्थान (5) के लिए उपयुक्त शब्द होगा

- Ans
- ✗ 1. खेलने
 - ✓ 2. रास्ता
 - ✗ 3. जानकारी
 - 4. विद्या

Question ID : 9895804094
Chosen Option : --

Q.2
5 सही वर्तनी वाले शब्द का चयन करें।

- Ans
- ✗ 1. मीतभाषी
 - ✗ 2. मीतभाशी
 - ✓ 3. मितभाषी
 - ✗ 4. मितभाशी

Question ID : 9895804103
Chosen Option : --

Constable (GD) in CAPFs, NIA, SSF and Rifleman (GD) in Assam Rifles Examination, 2018

Roll No. :	
Registration No.	
Name :	
Exam Venue :	ION Digital Zone iDZ Rajarajeswari Medical College and Hospital
Exam Time :	12:30 PM - 2:00 PM
Exam Date :	15/02/2019

Section : General Section

Q.1 In a certain code, LOVE is written as OLEV. How will IRIS be written in that code?

- Ans
- 1. IIRS
 - 2. IRSI
 - 3. RSII
 - 4. RISI

Question ID : 9895803602
Chosen Option : 1

Q.2 In a certain code, AXE is written as 120. How will FEE be written in that code?

- Ans
- 1. 150
 - 2. 80
 - 3. 60
 - 4. 20

Question ID : 9895803603
Chosen Option : 3

Q.3 Choose the odd one out of the given options.

- Ans
- 1. BIJ
 - 2. DGJ
 - 3. EGI
 - 4. CHI

Question ID : 9895803597
Chosen Option : 3

Q.4 A square transparent sheet with a pattern is given. How will the pattern appear when the transparent sheet is folded along the dotted line?



- Ans
- 1.
 - 2.



Question ID : 9895803619
Chosen Option : 4

Q.5 Select the option that is related to the third term in the same way as the second term is related to the first term.

EFG : JLN :: GKM : ?

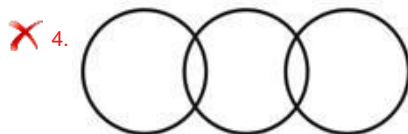
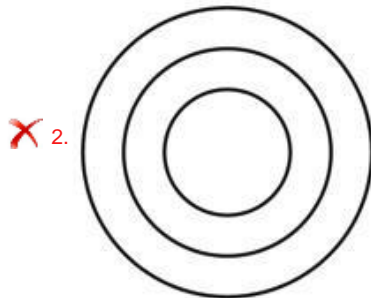
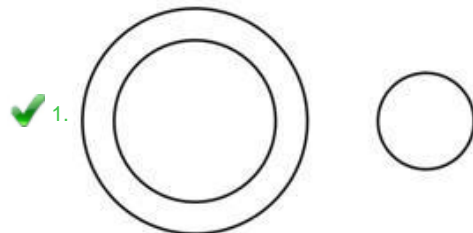
- Ans 1. NZY
 2. NVZ
 3. NUZ
 4. KMG

Question ID : 9895803601
Chosen Option : 4

Q.6 Select the Venn diagram that best represents the given set of classes.

Furniture, Chairs, Trees

Ans



Question ID : 9895803620
Chosen Option : 4

Q.7 Eight friends A, B, C, D, E, F, G and H are sitting around a circular table facing each other for a lunch. A is opposite D and third to the right of B. G is between A and F. H is to the immediate right of A. E is between C and D. Who is sitting opposite C?

- Ans 1. B
 2. F
 3. G
 4. E

Question ID : 9895803605
 Chosen Option : 3

Q.8 Select the option that will correctly replace the question mark (?) in the given pattern.



- Ans 1. 206
 2. 216
 3. 6
 4. 36

Question ID : 9895803613
 Chosen Option : 3

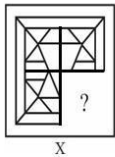
Q.9 J, K, L, M, N and O are six teachers. Each one teaches a different subject out of Hindi, English, Math, Science, Social Science and Arts, not necessarily in the same order. Each of them teaches on only one day, from Monday to Saturday, not necessarily in the same order.

J teaches Science on Wednesday. O teaches Math second after J. K teaches on the first day of the week, but teaches neither Hindi nor English. M teaches English before N and L teaches Arts before J. Who teaches on Saturday?

- Ans 1. M
 2. N
 3. K
 4. L

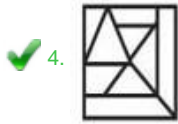
Question ID : 9895803606
 Chosen Option : 2

Q.1 Select a figure from amongst the four alternatives that when placed in the blank space (?) of figure X will complete the pattern. (Rotation is not allowed).



Ans

- 1.
- 2.
- 3.



Question ID : 9895803616
Chosen Option : 4

Q.1 Choose the option that most closely resembles the mirror image of the given figure when the mirror is placed at right side.



Ans



Question ID : 9895803618
Chosen Option : 4

Q.1 Seven friends O, P, Q, R, S, T and U are watching a movie sitting in a row. P is sitting at one extreme end. Q is sitting to the immediate left of S. P is sitting second to the right of T. U is not sitting at any extreme end. O is sitting between R and T. Who is sitting between P and T?

Ans

✗ 1. Q

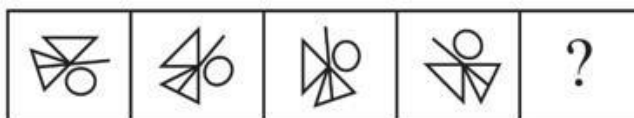
✗ 2. R

✓ 3. U

✗ 4. O

Question ID : 9895803604
Chosen Option : 2

Q.1 Choose the option that would follow next in the given figure series.



A B C D E

Ans



X 4.



Question ID : 9895803615
Chosen Option : 2

Q.1 Select the option that is related to the third term in the same way as the second term is related to the first term.

4

Pathology : Diseases :: Astronomy : ?

- Ans
- X 1. Future
 - X 2. Soil
 - ✓ 3. Planets
 - X 4. Shells

Question ID : 9895803599
Chosen Option : 1

Q.1 Select the option that will correctly replace the question mark (?) in the series.

5

109, 105, 89, 53, ?

- Ans
- X 1. 10
 - X 2. 11
 - X 3. -10
 - ✓ 4. -11

Question ID : 9895803609
Chosen Option : 1

Q.1 Choose the option in which the figure marked 'X' is embedded. (Rotation is not allowed)

6



X

- Ans
- X 1.
 - X 2.
 - X 3.
 - ✓ 4.

Question ID : 9895803617
Chosen Option : 1

Q.1 Select the option that will correctly replace the question mark (?) in the series.

7

TOD, RQB, PSZ, NUX, ?

- Ans
- X 1. LWW
 - ✓ 2. LWV
 - X 3.

4. LWU

Question ID : 9895803596
Chosen Option : 4

Q.1
8 Choose the odd number out of the given options.

- Ans 1. 45
 2. 75
 3. 85
 4. 105

Question ID : 9895803612
Chosen Option : 1

Q.1 The statements below are followed by two conclusions labeled I and II. Assuming that the information in the statements
9 is true, even if it appears at variance with generally established facts, decide which conclusion(s) logically and definitely follow(s) from the information given in the statements.

Statements:

- 1) All nails are pins.
- 2) All hammers are pins.

Conclusion:

- I. No nail is a pin.
- II. Some pins are nails.

- Ans 1. Neither conclusion I nor conclusion II follows.
 2. Only conclusion II follows.
 3. Only conclusion I follows.
 4. Both conclusions follow.

Question ID : 9895803607
Chosen Option : 3

Q.2
0 Select the option that will correctly replace the question mark (?) in the series.

9, 21, 38, 65, ?

- Ans 1. 125
 2. 115
 3. 105
 4. 107

Question ID : 9895803610
Chosen Option : 4

Q.2
1 Choose the odd one out of the given options.

- Ans 1. Purple
 2. Yellow
 3. Red
 4. Blue

Question ID : 9895803598
Chosen Option : 3

Q.2 Select the option that is related to the third number in the same way as the second number is related to the first number.

2

24 : 4 :: 45 : ?

- Ans 1. 5
 2. 7
 3. 8
 4. 6

Question ID : 9895803611
Chosen Option : 1

Q.2 Select the option that is related to the third term in the same way as the second term is related to the first term.

3

Famous : Obscure :: Crazy : ?

- Ans 1. Sane
 2. Clever
 3. Sink
 4. Foolish

Question ID : 9895803600
Chosen Option : 2

Q.2 Find out the two signs to be interchanged to make the following equation correct.

4

$$15 + 15 \times 15 - 15 \div 15 = 15$$

- Ans 1. - and \div
 2. + and -
 3. \times and \div
 4. + and \times

Question ID : 9895803614
Chosen Option : 3

Q.2 The statements below are followed by two conclusions labeled I and II. Assuming that the information in the statements is true, even if it appears at variance with generally established facts, decide which conclusion(s) logically and definitely follow(s) from the information given in the statements.

5

Statements:

- 1) Some angers are griefs.
- 2) Some griefs are loves.

Conclusion:

- I. Some griefs are angers.
- II. Some loves are griefs.

- Ans 1. Both conclusions follow.
 2. Only conclusion II follows.
 3. Only conclusion I follows.
 4. Neither conclusion I nor conclusion II follows.

Question ID : 9895803608
Chosen Option : 1

Q.2 With which Mughal ruler is the Moti Masjid in Agra associated?

6

- Ans 1.

- 2. Akbar
- 3. Humayun
- 4. Shah Jahan

Question ID : 9895805001
Chosen Option : 2

Q.2 Which of the following statements is NOT correct about the factors that gave rise to the Consumer Movement in India?
7

- Ans
- 1. Frequent food shortages
 - 2. Hoarding and Black Marketing
 - 3. Adulteration of food
 - 4. Tax on soft beverages

Question ID : 9895804992
Chosen Option : 1

Q.2 Which festival is celebrated to mark the birth anniversary of Prophet Muhammad?
8

- Ans
- 1. Eid-ul-fitr
 - 2. Shab-i-baraat
 - 3. Id-ul-azha
 - 4. Milad-un-nabi

Question ID : 9895804987
Chosen Option : 1

Q.2 What are dolphins, porpoises and whales called?
9

- Ans
- 1. Smack
 - 2. Amphibian
 - 3. Odontocetes
 - 4. Cetaceans

Question ID : 9895804984
Chosen Option : 2

Q.3 Which food delivery service provider was recently acquired by Ola?
0

- Ans
- 1. Foodpanda
 - 2. Uber eats
 - 3. Zomato
 - 4. Swiggy

Question ID : 9895804996
Chosen Option : 4

Q.3 What is the child sex ratio?
1

- Ans
- 1. Number of males per thousand females in the age group 0-15
 - 2. Number of females per thousand males in the age group 0-6

3. Number of females per hundred males in the age group 0-6

4.

Number of females per hundred males in the age group 0-15

Question ID : 9895804991
Chosen Option : 1

Q.3
2 Who won his first Stuttgart Open men's singles title in June 2018?

Ans 1. Dominic Thiem

2. Nicolas Mahut

3. Roger Federer

4. Milos Raonic

Question ID : 9895804980
Chosen Option : 3

Q.3
3 When was Rowlatt Satyagraha launched and by whom?

Ans 1. 1929, Mahatma Gandhi

2. 1915, Motilal Nehru

3. 1919, Mahatma Gandhi

4. 1930, C.R. Das

Question ID : 9895804978
Chosen Option : 2

Q.3
4 _____ cropping refers to, growing two or more crops simultaneously on the same piece of land.

Ans 1. Simple

2. Complex

3. Mixed

4. Inter

Question ID : 9895804998
Chosen Option : 1

Q.3
5 Which of the following is the national aquatic animal of India?

Ans 1. Whale

2. Turtle

3. Sea Horse

4. River Dolphin

Question ID : 9895805000
Chosen Option : 4

Q.3
6 Which of the following is a subject of the state list?

Ans 1. Banking

2. Defence

3. Police

4. Forests

Question ID : 9895804990
Chosen Option : 1

Q.3
7 Which British Viceroy in India carried out the partition of Bengal?

- Ans
1. Lord Canning
 2. Lord Lytton
 3. Lord Dalhousie
 4. Lord Curzon

Question ID : 9895805002
Chosen Option : 4

Q.3
8 The National Sports Development Fund (NSDF) was established by the Central Government in the year _____.

- Ans
1. 1997
 2. 1998
 3. 1996
 4. 1999

Question ID : 9895804982
Chosen Option : 4

Q.3
9 Which startup was recently honoured by UN for its efforts in cleaning the Ganga river?

- Ans
1. Navdanya Trust
 2. Satpuda foundation
 3. HelpUsGreen
 4. World Wide Fund

Question ID : 9895804994
Chosen Option : 2

Q.4
0 'Double coincidence of wants' is a feature of which system?

- Ans
1. Forex system
 2. Barter system
 3. Equity system
 4. Liquidity system

Question ID : 9895804981
Chosen Option : 1

Q.4
1 Curd is formed with the help of _____ bacteria.

- Ans
1. Bifidobacterium bifidum
 2. Lactic acid
 3. Lactobacillus acidophilus
 4. Bacillus coagulans

Question ID : 9895804999
Chosen Option : 1

Q.4
2 Which of these countries is an example of 'holding together federation'?

- Ans
- 1. New Zealand
 - 2. Australia
 - 3. USA
 - 4. India

Question ID : 9895804989
Chosen Option : 4

Q.4
3 Kalaripayattu is the martial art form prevalent in which Indian state?

- Ans
- 1. Tamil Nadu
 - 2. Kerala
 - 3. Karnataka
 - 4. Odisha

Question ID : 9895804983
Chosen Option : 2

Q.4
4 Which option represents the crops that are grown in June-July and are harvested in September-October?

- Ans
- 1. Rice, cotton
 - 2. Melon, barley
 - 3. Cucumber, watermelon
 - 4. Peas, wheat

Question ID : 9895804986
Chosen Option : 1

Q.4
5 Which Indian state is the largest bauxite producing state?

- Ans
- 1. Odisha
 - 2. Bihar
 - 3. Madhya Pradesh
 - 4. Jharkhand

Question ID : 9895804985
Chosen Option : 3

Q.4
6 Which tennis player received the Padma Shri in sports in 2018?

- Ans
- 1. Yuki Bhambri
 - 2. Sania Mirza
 - 3. Leander Paes
 - 4. Somdev Devvarman

Question ID : 9895804995
Chosen Option : 2

Q.4
7 Who is the author of the book 'Exam Warriors'?

- Ans 1. Narendra Modi
 2. Manmohan Singh
 3. Sushma Swaraj
 4. Arun Jaitley

Question ID : 9895804993
Chosen Option : 1

Q.4
8 Which declaration was signed at UNCED 1992 at Rio De Janeiro, Brazil?

- Ans 1. Agenda 39
 2. Agenda 19
 3. Agenda 22
 4. Agenda 21

Question ID : 9895804979
Chosen Option : 3

Q.4
9 What is the range of pH scale?

- Ans 1. 0 to 14
 2. 1 to 10
 3. 1 to 7
 4. 0 to 10

Question ID : 9895804997
Chosen Option : 1

Q.5
0 What was the capital of the Mauryan empire?

- Ans 1. Pataliputra
 2. Vaishali
 3. Indraprastha
 4. Kusinagra

Question ID : 9895804988
Chosen Option : 1

Q.5
1 A shopkeeper sells an article at a certain price. What is his gain or loss percent, if by selling it at 75% of that price, he loses 10%?

- Ans 1. Gain, 20%
 2. Gain, 25%
 3. Loss, 20%
 4. Loss, 25%

Question ID : 9895805160
Chosen Option : 2

Q.5
2 A man can row downstream a distance of 9 km in 2 hours and takes 6 hours while returning to the starting point. What is the speed (in km/h) of the stream?

- Ans 1. 2
 2. 2.5
 3. 1.5
 4. 3

Question ID : 9895805171
Chosen Option : 3

Q.5 The average weight of a certain number of students in a group is 54 kg. if 12 students of average weight 52 kg join the group, then the average weight of all the students in the group decreases by 750 g. what was the number of students, initially in the group?

- Ans 1. 18
 2. 24
 3. 15
 4. 20

Question ID : 9895805156
Chosen Option : 1

Q.5
4 Surbhi can do a piece of work in 24 days. She completed $\frac{3}{8}$ of the work and then left it. Amita complete the remaining work in 10 days. Working together, they will complete 125% of the same work in:

- Ans 1. 10 days
 2. 9 days
 3. 12 days
 4. 15 days

Question ID : 9895805174
Chosen Option : 1

Q.5 Study the following table and answer question.
5 Number of students appeared in an examination from five cities:

Cities	No. of Students (in thousand)	Ratio of students passed and failed
A	54	5 : 4
B	126	4 : 3
C	84	10 : 11
D	96	9 : 7
E	132	6 : 5

The ratio of the total number of students passed in the examination from cities A and D to that of students failed from cities B and E?

- Ans 1. 9 : 16
 2. 5 : 9
 3. 13 : 18
 4. 14 : 19

Question ID : 9895805175
Chosen Option : 1

Q.5 The ratio of ages of A and B, 4 years ago, was 5 : 7. The ratio of their ages after 4 years from now will be 7 : 9. What will be the ratio of ages of A and B after 12 years from now?

- Ans 1. 8 : 13
 2. 13 : 17
 3. 9 : 11

X 4. 15 : 19

Question ID : 9895805163
Chosen Option : 4

Q.5 The surface area of a cuboidal box is 240 cm^2 and the length of its diagonal is 11 cm. What is the sum (in cm) of its
7 length, breadth and depth?

- Ans **X** 1. 21
✓ 2. 19
X 3. 20
X 4. 17

Question ID : 9895805170
Chosen Option : 4

Q.5 The area of an equilateral triangle is $6\sqrt{3}$ times the area of a rhombus whose one side measures 13 cm and one diagonal
8 is 10 cm. The length of side of the triangle, in cm, is:

- Ans 1. $36\sqrt{6}$
X 2. $24\sqrt{6}$
3. $24\sqrt{5}$
X 4. $12\sqrt{6}$

Question ID : 9895805168
Chosen Option : 4

Q.5 Let x be the least number which when divided by 12, 15, 18, 20 and 27, the remainder in each case is 2, but x is
9 divisible by 23. If x is divided by the sum of its digits then the quotient is:

- Ans **✓** 1. 196
X 2. 149
X 3. 193
X 4. 199

Question ID : 9895805153
Chosen Option : 3

Q.6 Two trains A and B, 186 m and 200 m long, are running at 64 km/h and 80 km/h, respectively on parallel tracks. If they
0 are running in the opposite directions, then how much time (in seconds) will a person sitting in the first train A take to cross the other train?

- Ans **X** 1. 5.5
✓ 2. 5
X 3. 6
X 4. 4.5

Question ID : 9895805172
Chosen Option : 4

Q.6 The ratios of spirit and water in vessels A and B are 4 : 5 and 7 : 11, respectively. The contents of A and B are mixed in
1 the ratio 2 : 5. What is the ratio of spirit and water in the resulting solution?

- Ans **X** 1. 22 : 75
X 2. 53 : 75
✓ 3. 17 : 25
X 4. 13 : 20

Question ID : 9895805164
Chosen Option : 4

Q.6
2 The average of 17 numbers is 29. The average of first 9 numbers is 31 and the average of the last 9 numbers is 27. If 9th number is excluded, then what is the average of the remaining numbers?

- Ans
- 1. 31
 - 2. 31.6
 - 3. 29.5
 - 4. 29

Question ID : 9895805157
Chosen Option : 4

Q.6
3 The value of $\frac{0.2 \div 0.2 \text{ of } 0.1 - 0.03 \div 0.6 \text{ of } 0.01}{0.25 \times 0.75 \div 1.25 \text{ of } 0.4 + 0.125}$ lies between:

- Ans
- 1. 10.5 and 11.5
 - 2. 11.5 and 12.5
 - 3. 9.5 and 10.5
 - 4. 8.5 and 9.5

Question ID : 9895805155
Chosen Option : 4

Q.6
4 The difference between the mean and median of the data 66, 59, 68, 65, 62, 59, 58, 56, 63, 65 is:

- Ans
- 1. 0.4
 - 2. 1
 - 3. 0.8
 - 4. 0.5

Question ID : 9895805167
Chosen Option : 2

Q.6
5 A certain sum amounts to ₹9243.20 in $1\frac{1}{2}$ years at 4% p.a. simple interest. What will be the simple interest on the same sum for $7\frac{1}{2}$ years at 8% per annum?

- Ans
- 1. ₹5580
 - 2. ₹5223
 - 3. ₹5232
 - 4. ₹5508

Question ID : 9895805165
Chosen Option : 2

Q.6
6 A sum of ₹12000 will amount to ₹x at 12% p.a after 2 years, when the interest is compounded 8-monthly. The value of x is (nearest to an integer)

- Ans
- 1. 15111
 - 2. 15083
 - 3. 15117
 - 4. 15053

Question ID : 9895805166
Chosen Option : 2

Q.6 The radius of a metallic sphere is 3 cm. it is melted and drawn into a wire of uniform circular section of 0.1 cm. the length of the wire will be (in m):

- Ans
- 1. 44
 - 2. 24
 - 3. 36
 - 4. 40

Question ID : 9895805169
Chosen Option : 2

Q.6 Anu sells an article at a profit of 25%. If she had bought it at 25% less and sold it for ₹30.25 less she would have gained 30%. What is the original price (in ₹) of the article?

- Ans
- 1. 108
 - 2. 105.50
 - 3. 105.80
 - 4. 110

Question ID : 9895805159
Chosen Option : 2

Q.6 The ratio of the mean proportional between 0.7 and 2.8 and the third proportional to 2.5 and 3.5 is:

- Ans
- 1. 7 : 2
 - 2. 2 : 7
 - 3. 7 : 3
 - 4. 3 : 7

Question ID : 9895805162
Chosen Option : 2

Q.7 Study the following table and answer question.
0 Number of students appeared in an examination from five cities:

Cities	No. of Students (in thousand)	Ratio of students passed and failed
A	54	5 : 4
B	126	4 : 3
C	84	10 : 11
D	96	9 : 7
E	132	6 : 5

The total number of students who appeared in the examination from cities C and D is what percent more than the total number of students who failed in cities A, B and E? (nearest to an integer)

- Ans
- 1. 44
 - 2. 30
 - 3. 41
 - 4. 42

Question ID : 9895805177
Chosen Option : 1

Q.7 1 The value of $\left[\frac{2}{3} \div \frac{8}{15} \text{ of } \frac{2}{5} + \frac{2}{5} \text{ of } 7 \frac{1}{2} \div \frac{3}{4} \right] \text{ of } \frac{4}{19}$ is:

- Ans
- 1. 1
 - 2. $1\frac{1}{4}$

✓ 3. $1\frac{1}{2}$

4. $\frac{1}{2}$

Question ID : 9895805154
Chosen Option : 1

Q.7 Study the following table and answer question.
2 Number of students appeared in an examination from five cities:

Cities	No. of Students (in thousand)	Ratio of students passed and failed
A	54	5 : 4
B	126	4 : 3
C	84	10 : 11
D	96	9 : 7
E	132	6 : 5

The number of cities in which passing percentage of students is below 56% is:
Ans 1. 1
 2. 3
 3. 2
 4. 4

Question ID : 9895805176
Chosen Option : 3

Q.7 Two pipes X and Y can fill an empty tank in 't' minutes. If pipe X alone takes 6 minutes more than 't' to fill the tank and Y alone takes 54 minutes more than 't' to fill the tank, then X and Y together will fill the tank in:

3
Ans 1. 18 sec
 2. 12 sec
 3. 27 sec
 4. 24 sec

Question ID : 9895805173
Chosen Option : 3

Q.7 The price of oil is increased by 20%. However, the expenditure on it increases by 15%. What is the percentage increase or decrease in the consumption of oil?

4
Ans 1. $6\frac{1}{4}\%$, decrease
2. $4\frac{1}{6}\%$, decrease
3. $4\frac{1}{6}\%$, increase
4. $6\frac{1}{4}\%$, increase

Question ID : 9895805161
Chosen Option : 3

Q.7 A person makes a profit of 17% after allowing 10% discount on its marked price. If he gives 14% discount on the marked price, then his profit percent is:

5

- Ans 1. 11.8
 2. 14.6
 3. 10.6
 4. 23.8

Question ID : 9895805158
Chosen Option : 3

Section : English Language

Q.1 Select the most appropriate option to substitute the underlined segment in the given sentence. If there is no need to substitute it, select No Improvement.

They thought she was arrogant, and she was very shy.

- Ans 1. as soon as she was
 2. so that she was
 3. No improvement
 4. whereas she was

Question ID : 9895804544
Chosen Option : 1

Q.2 From the given options, identify the segment in the sentence which contains the grammatical error.

He not only got a scholarship and also a good job.

- Ans 1. and also
 2. a good job.
 3. not only
 4. got a scholarship

Question ID : 9895804542
Chosen Option : 1

Q.3 Select the most appropriate option to fill in the blank.

She did not reply _____ my letter.

- Ans 1. against
 2. for
 3. with
 4. to

Question ID : 9895804546
Chosen Option : 2

Q.4 Select the correctly spelt word.

- Ans 1. Fullfil
 2. Fullfill
 3. Fulfil
 4. Foolfil

Question ID : 9895804565
Chosen Option : 2

Q.5 Select the word which means the same as the group of words given.

The practice of marrying one person at a time.

- Ans 1. Monogamy
 2. Monotony
 3. Polygamy
 4. Bigamy

Question ID : 9895804558
Chosen Option : 1

Q.6 Select the antonym of the given word.

Attack

- Ans 1. Defence
 2. Secure
 3. Assent
 4. Refuse

Question ID : 9895804557
Chosen Option : 4

Q.7 Select the correctly spelt word.

- Ans 1. Remembrance
 2. Remembranse
 3. Remembarence
 4. Rememberance

Question ID : 9895804564
Chosen Option : 1

Comprehension:

In the following passage some words have been deleted. Fill in the blanks with the help of the alternatives given.

Flood is a common natural disaster. Scientists have often tried to (1) _____ floods. There are a number of reasons that (2) _____ floods, including heavy rain and cloudbursts. Due to these reasons, rivers (3) _____ their banks and cover the surrounding land. Sometimes, dams break and cause disastrous floods that (4) _____ to large-scale destruction. Timely safety (5) _____ should be taken to save human life and property.

SubQuestion No : 8

Q.8 Select the most appropriate option that will fill in the blank number 1.

- Ans 1. control
 2. predict
 3. prevent

4. avoid

Question ID : 9895804549
Chosen Option : 1

Comprehension:

In the following passage some words have been deleted. Fill in the blanks with the help of the alternatives given.

Flood is a common natural disaster. Scientists have often tried to (1) _____ floods. There are a number of reasons that (2) _____ floods, including heavy rain and cloudbursts. Due to these reasons, rivers (3) _____ their banks and cover the surrounding land. Sometimes, dams break and cause disastrous floods that (4) _____ to large-scale destruction. Timely safety (5) _____ should be taken to save human life and property.

SubQuestion No : 9

Q.9 Select the most appropriate option that will fill in the blank number 2.

- Ans
- 1. occur
 - 2. arouse
 - 3. happen
 - 4. cause

Question ID : 9895804550
Chosen Option : 3

Comprehension:

In the following passage some words have been deleted. Fill in the blanks with the help of the alternatives given.

Flood is a common natural disaster. Scientists have often tried to (1) _____ floods. There are a number of reasons that (2) _____ floods, including heavy rain and cloudbursts. Due to these reasons, rivers (3) _____ their banks and cover the surrounding land. Sometimes, dams break and cause disastrous floods that (4) _____ to large-scale destruction. Timely safety (5) _____ should be taken to save human life and property.

SubQuestion No : 10

Q.10 Select the most appropriate option that will fill in the blank number 3.

- Ans
- 1. wash
 - 2. drown
 - 3. overflow
 - 4. reach

Question ID : 9895804551
Chosen Option : 3

Comprehension:

In the following passage some words have been deleted. Fill in the blanks with the help of the alternatives given.

Flood is a common natural disaster. Scientists have often tried to (1) _____ floods. There are a number of reasons that (2) _____ floods, including heavy rain and cloudbursts. Due to these reasons, rivers (3) _____ their banks and cover the surrounding land. Sometimes, dams break and cause disastrous floods that (4) _____ to large-scale destruction. Timely safety (5) _____ should be taken to save human life and property.

SubQuestion No : 11

Q.1
1 Select the most appropriate option that will fill in the blank number 4.

- Ans
- 1. lead
 - 2. led
 - 3. leading
 - 4. leads

Question ID : 9895804552
Chosen Option : 3

Comprehension:

In the following passage some words have been deleted. Fill in the blanks with the help of the alternatives given.

Flood is a common natural disaster. Scientists have often tried to (1) _____ floods. There are a number of reasons that (2) _____ floods, including heavy rain and cloudbursts. Due to these reasons, rivers (3) _____ their banks and cover the surrounding land. Sometimes, dams break and cause disastrous floods that (4) _____ to large-scale destruction. Timely safety (5) _____ should be taken to save human life and property.

SubQuestion No : 12

Q.1
2 Select the most appropriate option that will fill in the blank number 5.


- Ans
- 1. measures
 - 2. products
 - 3. items
 - 4. causes

Question ID : 9895804553
Chosen Option : 3

Q.1
3 Select the synonym of the given word.

IDENTICAL

- Ans
- 1. Perfect
 - 2. Same
 - 3. Corresponding

 4. Varied

Question ID : 9895804554
Chosen Option : 1

Q.1
4 Select the synonym of the given word.





GLEE

- Ans
1. Happiness
 -  2. Hearty
 -  3. Laughter
 -  4. Jump

Question ID : 9895804555
Chosen Option : 2

Q.1
5 Select the word which means the same as the group of words given.



That which can be seen through

- Ans
-  1. Vague
 -  2. Opaque
 -  3. Foggy
 -  4. Transparent

Question ID : 9895804559
Chosen Option : 4

Q.1
6 From the given options, identify the segment in the sentence which contains the grammatical error.

The T.V. and the computer has been blamed for reduced reading habits amongst children.

- Ans
1. The T.V. and the computer
 -  2. has been blamed
 -  3. for reduced
 4. amongst children.

Question ID : 9895804540
Chosen Option : 2

Q.1
7 From the given options, identify the segment in the sentence which contains the grammatical error.

I am fastly excited and really looking forward to the trip.

- Ans
1. to the trip
 2. and really
 3. looking forward
 4. I am fastly

Question ID : 9895804541
Chosen Option : 2

Q.1
8

Select the most appropriate word to fill in the blank.

He likes to do stunts with his bike. He is a _____

- Ans
- 1. daredevil
 - 2. busybody
 - 3. wind bag
 - 4. little bug

Question ID : 9895804562
Chosen Option : 2

Q.1 Select the most appropriate option to substitute the underlined segment in the given sentence. If there is no need to substitute it, select No Improvement.

There were not any excuse for not participating in the competition.

- Ans
- 1. No improvement
 - 2. no excuse
 - 3. no excuses
 - 4. no any excuse

Question ID : 9895804545
Chosen Option : 1

Q.2 Select the antonym of the given word.

ABOVE

- Ans
- 1. Below
 - 2. Less
 - 3. Down
 - 4. Across

Question ID : 9895804556
Chosen Option : 1

Q.2 Select the option that means the same as the given idiom.

To measure swords

- Ans
- 1. To push an opponent
 - 2. To argue with someone
 - 3. To confess one's mistake
 - 4. To engage in competition

Question ID : 9895804874
Chosen Option : 4

Q.2 Select the option that means the same as the given idiom.

Out of order

- Ans
- 1. Out of place
 - 2. In good condition

3. Not in working condition

4. Out of nowhere

Question ID : 9895804561
Chosen Option : 3

Q.2 Select the most appropriate option to substitute the underlined segment in the given sentence. If there is no need to substitute it, select No improvement.

You need to curb your temper or you might offended someone.

- Ans
1. you might be offend
 2. you might offend
 3. No improvement
 4. you might offending

Question ID : 9895804543
Chosen Option : 4

Q.2 Select the most appropriate option to fill in the blank.

I told him to avoid fighting, but he won't _____.

- Ans
1. doing it
 2. did it
 3. do it
 4. does it

Question ID : 9895804547
Chosen Option : 2

Q.2 Select the most appropriate word to fill in the blank.

My mother is _____ riser.

- Ans
1. a fast
 2. an early
 3. a quick
 4. an easy

Question ID : 9895804563
Chosen Option : 1

Section : Hindi Language

Q.1 रिक्त स्थान को भरने के लिए उपयुक्त शब्द का चयन करें।

वह सदैव _____ से बड़ों का आदर करता है।

- Ans
1. पराये
 2. हमारे
 3. तुम्हारे

4. अपने

Question ID : 9895804882

Chosen Option : --

Q.2 दिए गए शब्द के पर्यायवाची शब्द का चयन करें।

शिक्षक

Ans

1. गुरु
2. विभा
3. विद्यार्थी
4. दिवाकर

Question ID : 9895804895

Chosen Option : --

Q.3 निम्नलिखित में से उस विकल्प का चयन करें जो 'ओखली में सिर देना' मुहावरे का अर्थ व्यक्त करता है।

Ans

- ✓ 1. जान बूझकर मुसीबत में पड़ना
2. ओखली में सिर देकर उसे कूटना
3. ओखली को सिर पर रखना
4. ओखली के समान सर होना

Question ID : 9895804896

Chosen Option : --

Q.4 दिए गए शब्द का विलोम चुनें।

उष्ण

Ans

1. शीत
- ✗ 2. लहर
- ✗ 3. उपमा
- ✗ 4. उष्मा

Question ID : 9895804892

Chosen Option : --

Q.5 दिये गये वाक्यांश के लिए एक शब्द चुनिए।

जो दूर की सोचता है

Ans

1. एकादशी
2. चतुर्दशी
3. दूरदर्शी
4. द्वादशी

Question ID : 9895804899

Q.6 दिए गए वाक्य का वह भाग ज्ञात करें जिसमें कोई त्रुटि है।

कोई गुंडा भरे बाज़ार में किसी को हत्या करके चला गया।

Ans

- ✓ 1. कोई गुंडा
- ✗ 2. चला गया।
- 3. किसी को हत्या करके
- 4. भरे बाजार में

Question ID : 9895804876
Chosen Option : --

Comprehension:

दिए गए अनुच्छेद में कुछ शब्द हटा दिए गए हैं। दिए गए विकल्पों की सहायता से रिक्त स्थान भरें। प्रत्येक संख्या के लिए उपयुक्त विकल्प का चयन करें।

एक अत्याचारी शासक एक चीते से अधिक _____ (1) होता है। अत्याचारी शासन में रहने की अपेक्षा _____ (2) है कि किसी पहाड़ी अथवा वन में रह लिया जाए। जनता को चाहिए कि वह अत्याचारी शासन का समुचित _____ (3) करे और सत्ताधारी को अपना _____ (4) करने के लिए विवश करने का उपाय करे। अत्याचारी शासन को भय के कारण सहन करने वाला समाज किसी प्रकार की _____ (5) नहीं कर पाता।

SubQuestion No : 7

Q.7 गद्यांश में संकेतित रिक्त स्थान (1) के लिए उपयुक्त शब्द होगा -

Ans

- ✗ 1. मस्त
- ✓ 2. कमाल
- 3. रोचक
- 4. भयंकर

Question ID : 9895804887
Chosen Option : --

Comprehension:

दिए गए अनुच्छेद में कुछ शब्द हटा दिए गए हैं। दिए गए विकल्पों की सहायता से रिक्त स्थान भरें। प्रत्येक संख्या के लिए उपयुक्त विकल्प का चयन करें।

एक अत्याचारी शासक एक चीते से अधिक _____ (1) होता है। अत्याचारी शासन में रहने की अपेक्षा _____ (2) है कि किसी पहाड़ी अथवा वन में रह लिया जाए। जनता को चाहिए कि वह अत्याचारी शासन का समुचित _____ (3) करे और सत्ताधारी को अपना _____ (4) करने के लिए विवश करने का उपाय करे। अत्याचारी शासन को भय के कारण सहन करने वाला समाज किसी प्रकार की _____ (5) नहीं कर पाता।

SubQuestion No : 8

Q.8 गद्यांश में संकेतित रिक्त स्थान (2) के लिए उपयुक्त शब्द होगा -

- Ans 1. अच्छा
 2. किस्सा
 3. खोना
 4. नाटक

Question ID : 9895804888
Chosen Option : --

Comprehension:

दिए गए अनुच्छेद में कुछ शब्द हटा दिए गए हैं। दिए गए विकल्पों की सहायता से रिक्त स्थान भरें। प्रत्येक संख्या के लिए उपयुक्त विकल्प का चयन करें।

एक अत्याचारी शासक एक चीते से अधिक _____ (1) होता है। अत्याचारी शासन में रहने की अपेक्षा _____ (2) है कि किसी पहाड़ी अथवा वन में रह लिया जाए। जनता को चाहिए कि वह अत्याचारी शासन का समुचित _____ (3) करे और सत्ताधारी को अपना _____ (4) करने के लिए विवश करने का उपाय करे। अत्याचारी शासन को भय के कारण सहन करने वाला समाज किसी प्रकार की _____ (5) नहीं कर पाता।

SubQuestion No : 9

Q.9 गद्यांश में संकेतित रिक्त स्थान (3) के लिए उपयुक्त शब्द होगा -

Ans

1. विरोध
2. जोश
3. उमंग
- ✓ 4. उत्साह

Question ID : 9895804889
Chosen Option : --

Comprehension:

दिए गए अनुच्छेद में कुछ शब्द हटा दिए गए हैं। दिए गए विकल्पों की सहायता से रिक्त स्थान भरें। प्रत्येक संख्या के लिए उपयुक्त विकल्प का चयन करें।

एक अत्याचारी शासक एक चीते से अधिक _____ (1) होता है। अत्याचारी शासन में रहने की अपेक्षा _____ (2) है कि किसी पहाड़ी अथवा वन में रह लिया जाए। जनता को चाहिए कि वह अत्याचारी शासन का समुचित _____ (3) करे और सत्ताधारी को अपना _____ (4) करने के लिए विवश करने का उपाय करे। अत्याचारी शासन को भय के कारण सहन करने वाला समाज किसी प्रकार की _____ (5) नहीं कर पाता।

SubQuestion No : 10

Q.1
0 गद्यांश में संकेतित रिक्त स्थान (4) के लिए उपयुक्त शब्द होगा -

Ans

1. सुधार
2. मजदूर
3. दुर्बल
4. मजबूत

Question ID : 9895804890
Chosen Option : --

Comprehension:

दिए गए अनुच्छेद में कुछ शब्द हटा दिए गए हैं। दिए गए विकल्पों की सहायता से रिक्त स्थान भरें। प्रत्येक संख्या के लिए उपयुक्त विकल्प का चयन करें।

एक अत्याचारी शासक एक चीते से अधिक _____ (1) होता है। अत्याचारी शासन में रहने की अपेक्षा _____ (2) है कि किसी पहाड़ी अथवा वन में रह लिया जाए। जनता को चाहिए कि वह अत्याचारी शासन का समुचित _____ (3) करे और सत्ताधारी को अपना _____ (4) करने के लिए विवश करने का उपाय करे। अत्याचारी शासन को भय के कारण सहन करने वाला समाज किसी प्रकार की _____ (5) नहीं कर पाता।

SubQuestion No : 11

Q.1
1 गद्यांश में संकेतित रिक्त स्थान (5) के लिए उपयुक्त शब्द होगा -

- Ans
1. विवाह
 2. अवनति
 3. उन्नति
 4. अज्ञान

Question ID : 9895804891
Chosen Option : --

Q.1
2 दिए गए वाक्य में रेखांकित खंड को प्रतिस्थापित करने के लिए उपयुक्त विकल्प का चयन करें।

आज की सभा में फूलों के गुलदस्ता अतिथि को भेंट किया गया।

- Ans
1. फूलों का गुलदस्ता
 2. फूलों में गुलदस्ता
 3. फूलों से गुलदस्ता
 4. फूलों की गुलदस्ता

Question ID : 9895804880
Chosen Option : --

Q.1
3 निम्नलिखित में से उस विकल्प का चयन करें जो 'कलेजे पर पत्थर रखना' मुहावरे का अर्थ व्यक्त करता है।

- Ans
1. भारी पत्थर कलेजे पर रखना
 2. जी कड़ा करना
 3. दिल बड़ा करना
 4. कलेजे को पत्थर पर रखना

Q.1
4 सही वर्तनी वाले शब्द का चयन करें।

- Ans
1. जयेष्ठ
 2. ज्येष्ठ
 3. ज्येष्ठ
 4. ज्येश्ठ

Q.1
5 दिए गए शब्द का विलोम चुनें।

अपत्यय

- Ans
1. व्यर्थव्यय
 2. खर्चीला
 3. अतिव्यय
 4. मितव्यय

Q.1
6 दिए गए वाक्य का वह भाग ज्ञात करें जिसमें कोई त्रुटि है।

जो लोग विवेकी हैं वे मानवजाति को विनाश की ओर बढ़ते देखकर विचलित होता हैं।

- Ans
1. मानवजाति को
 2. विनाश की ओर बढ़ते देखकर
 3. विचलित होता हैं।
 4. जो लोग विवेकी हैं

Q.1
7 दिए गए शब्द के पर्यायवाची शब्द का चयन करें।

गोधूलि

- Ans
1. रात
 2. संध्या
 3. सुबह
 4. दिन

रिक्त स्थान को भरने के लिए उपयुक्त शब्द का चयन करें।

_____ में बाजार गया तो सामान अवश्य लाऊँगा।

Ans

1. जिससे
2. यदि
3. यदापि
4. इसलिए

Question ID : 9895804885
Chosen Option : --

Q.1 दिए गए वाक्य में रेखांकित खंड को प्रतिस्थापित करने के लिए उपयुक्त विकल्प का चयन करें।

मनुष्य को पुण्य कर्म करता चाहिए।

Ans

1. पुण्य कर्मों करने चाहिए।
2. पुण्य कर्म करना चाहिए।
3. पुण्य कर्म करते चाहिए।
4. पुण्य कर्म करनी चाहिए।

Question ID : 9895804879
Chosen Option : --

Q.2 रिक्त स्थान को भरने के लिए उपयुक्त शब्द का चयन करें।

मेरे माता-पिता की ओर से _____ ढेर सारा प्यार।

Ans

1. किसी
2. सभी
3. मुझे
4. तुम्हें

Question ID : 9895804884
Chosen Option : --

Q.2 रिक्त स्थान को भरने के लिए उपयुक्त शब्द का चयन करें।

राम ने साँप को लाठी _____ मारा।

Ans

1. ने
2. पर
3. में
4. से

Question ID : 9895804883
Chosen Option : --

Q.2
2 दिये गये वाक्यांश के लिए एक शब्द चुनिए।

जो सबको प्रिय हो

Ans

1. शोभनीय
2. सुन्दर
3. सर्वप्रिय
4. रमणीय

Question ID : 9895804898
Chosen Option : --

Q.2
3 सही वर्तनी वाले शब्द का चयन करें।

Ans

1. दुरलभ
2. दुरभल
3. दूर्लभ
4. दुर्लभ

Question ID : 9895804900
Chosen Option : --

Q.2
4 दिए गए वाक्य में रेखांकित खंड को प्रतिस्थापित करने के लिए उपयुक्त विकल्प का चयन करें।

साँप को देखकर छोटा बच्चा उसको डर गया।

Ans

1. उस पर डर गया।
2. उसमें डर गया।
3. उससे डर गया।
4. उसकी डर गया।

Question ID : 9895804881
Chosen Option : --

Q.2
5 दिए गए वाक्य का वह भाग ज्ञात करें जिसमें कोई त्रुटि है।

महानगरों की जीवन शैली तृष्णा का भरी है और यहाँ रहने वाला लाखों कमाकर भी बेचैन है।

Ans

1. तृष्णा का भरी है।
2. और यहाँ रहने वाला
3. लाखों कमाकर भी बेचैन है।
4. महानगरों की जीवन शैली

Question ID : 9895804877
Chosen Option : --

Constable (GD) in CAPFs, NIA, SSF and Rifleman (GD) in Assam Rifles Examination, 2018

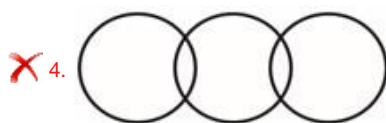
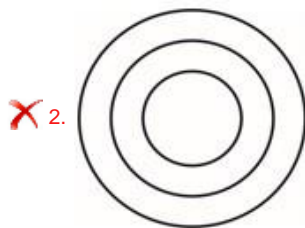
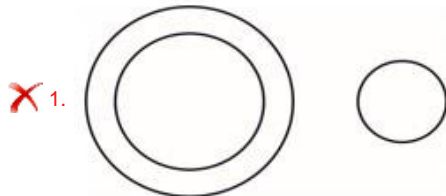
Roll No. :	
Registration No.	
Name :	
Exam Venue :	iON Digital Zone iDZ 2 Chinamushidiwada
Exam Time :	4:00 PM - 5:30 PM
Exam Date :	15/02/2019

Section : General Section

Q.1 Select the Venn diagram that best represents the given set of classes.

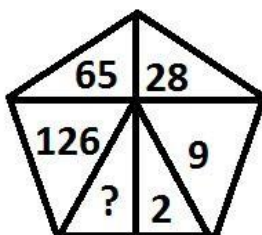
Stationery, Pen, Eraser

Ans



Question ID : 9895803645
Chosen Option : 3

Q.2 Select the option that will correctly replace the question mark (?) in the given pattern.



Ans 1. 1

2. 216

✓ 3. 217

✗ 4. 36

Question ID : 9895803638

Chosen Option : 3

Q.3 Select the option that will correctly replace the question mark (?) in the series.

7, 19, 36, 63, ?

Ans ✗ 1. 125

✓ 2. 105

✗ 3. 115

✗ 4. 95

Question ID : 9895803635

Chosen Option : 3

Q.4 Select the option that will correctly replace the question mark (?) in the series.

107, 103, 87, 51, ?

Ans ✓ 1. -13

✗ 2. 15

✗ 3. 13

✗ 4. -15

Question ID : 9895803634

Chosen Option : 4

Q.5 In a certain code, COMPUTER is written as CEMOPRTU. How will CUPBOARD be written in that code?

Ans ✓ 1. ABCDOPRU

✗ 2. ABCDORPU

✗ 3. ABCDOQRU

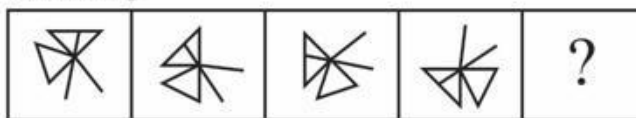
✗ 4. ABDCOPRU

Question ID : 9895803627

Chosen Option : 3

Q.6 Choose the option that would follow next in the given figure series.

Problem Fig.



A

B

C

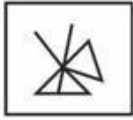
D

E

Ans



✓ 3.



✗ 4.



Question ID : 9895803640
Chosen Option : 1

Q.7 The statements below are followed by two conclusions labeled I and II. Assuming that the information in the statements is true, even if it appears at variance with generally established facts, decide which conclusion(s) logically and definitely follow(s) from the information given in the statements.

Statements:

- 1) Some tables are sofas.
- 2) Some sofas are papers.

Conclusion

I: Some sofas are tables.

II: Some papers are sofas.

- Ans**
1. Only conclusion I follows.
 2. Only conclusion II follows.
 - ✓ 3. Both conclusions follow.
 - ✗ 4. Neither conclusion I nor conclusion II follows.

Question ID : 9895803633
Chosen Option : 4

Q.8 Select the option that will correctly replace the question mark (?) in the series.

RGN, PIM, NKL, ?

- Ans**
- ✓ 1. LMK
 - ✗ 2. LMJ
 - ✗ 3. LVW
 - ✗ 4. LWU

Question ID : 9895803621
Chosen Option : 1

Q.9 Select the option that is related to the third number in the same way as the second number is related to the first number.

54 : 6 :: 42 : ?

- Ans**
- ✗ 1. 5
 - ✗ 2. 6
 - ✗ 3. 9
 - ✓ 4. 7

Question ID : 9895803636
Chosen Option : 1

Q.1 In a certain code, JOY is written as 150. How will FEED be written in that code?

- Ans**
- ✓ 1. 80
 - ✗ 2.

3. 50

4. 20

Question ID : 9895803628
Chosen Option : 1

Q.1 Eight friends A, B, C, D, E, F, G and H are sitting around a circular table facing each other for a lunch. A is opposite D and third to the right of B. G is between A and F. H is to the right of A. E is between C and D. Who is sitting opposite G?

- Ans**
- 1. F
 - 2. C
 - 3. B
 - 4. E

Question ID : 9895803630
Chosen Option : 3

Q.1 The statements below are followed by two conclusions labeled I and II. Assuming that the information in the statements is true, even if it appears at variance with generally established facts, decide which conclusion(s) logically and definitely follow(s) from the information given in the statements.

Statements:

- 1) All spiders are snails.
- 2) All molars are snails.

Conclusion

- I: No spider is a molar.
- II: Some spiders are molars.

- Ans**
- 1. Only conclusion II follows.
 - 2. Only conclusion I follows.
 - 3. Either conclusion I or conclusion II follows.
 - 4. Both conclusions follow.

Question ID : 9895803632
Chosen Option : 3

Q.1 Choose the option that most closely resembles the mirror image of the given figure when the mirror is placed at the right

3
side.



- Ans**
- 1.
 - 2.
 - 3.
 - 4.

Question ID : 9895803643

Q.1
4 Choose the odd number out of the given options.

- Ans
- 1. 17
 - 2. 89
 - 3. 63
 - 4. 37

Question ID : 9895803637
Chosen Option : 4

Q.1
5 Choose the odd one out of the given options.

- Ans
- 1. Legs
 - 2. Stomach
 - 3. Heart
 - 4. Kidneys

Question ID : 9895803623
Chosen Option : 4

Q.1
6 Seven friends O, P, Q, R, S, T and U are watching a movie sitting in a row. P is sitting at one extreme end. Q is sitting to the immediate left of S. P is sitting second to the right of T. U is not sitting at any extreme end. O is sitting between R and T. Who is sitting in the middle?

- Ans
- 1. T
 - 2. R
 - 3. O
 - 4. Q

Question ID : 9895803629
Chosen Option : 2

Q.1
7 A square transparent sheet with a pattern is given. How will the pattern appear when the transparent sheet is folded along the dotted line?



- Ans
- 1.
 - 2.
 - 3.
 - 4.

Question ID : 9895803644
Chosen Option : 2

8 Choose the odd one out of the given options.

- Ans
- 1. CJK
 - 2. EHK
 - 3. FHJ
 - 4. KOJ

Question ID : 9895803622
Chosen Option : 3

Q.1 Select the option that is related to the third term in the same way as the second term is related to the first term.

9
Ichthyology: Fishes : : Palaeography : ?

- Ans
- 1. Writings
 - 2. Soil
 - 3. Shells
 - 4. Moon

Question ID : 9895803624
Chosen Option : 1

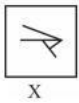
Q.2 Find out the two signs to be interchanged to make the following equation correct.

$$27 + 27 \times 27 - 27 \div 27 = -701$$

- Ans
- 1. - and \times
 - 2. + and \div
 - 3. - and \div
 - 4. \times and \div

Question ID : 9895803639
Chosen Option : 3

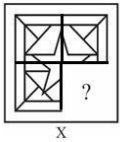
Q.2 Choose the option in which the figure marked 'X' is embedded. (Rotation is not allowed)



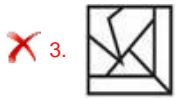
- Ans
- 1.
 - 2.
 - 3.
 - 4.

Question ID : 9895803642
Chosen Option : 2

Q.2 Select a figure from amongst the four alternatives that when placed in the blank space (?) of figure X will complete the pattern. (Rotation is not allowed).



Ans



Question ID : 9895803641
Chosen Option : 4

Q.2 J, K, L, M, N and O are six teachers. Each one teaches a different subject out of Hindi, English, Math, Science, Social Science and Arts, not necessarily in the same order. Each of them teaches on only one day, from Monday to Saturday, not necessarily in the same order.

J teaches Science on Wednesday. O teaches Math second after J. K teaches on the first day of the week, but teaches neither Hindi nor English. M teaches English before N and L teaches Arts before J. Which subject is taught on Thursday?

- Ans
- 1. Science
 - 2. Arts
 - 3. English
 - 4. Social Science

Question ID : 9895803631
Chosen Option : 4

Q.2 Select the option that is related to the third term in the same way as the second term is related to the first term.

4 BFH : EIK :: GKM : ?

- Ans
- 1. JNP
 - 2. KMG
 - 3. MKG
 - 4. IKM

Question ID : 9895803626
Chosen Option : 1

Q.2 Select the option that is related to the third term in the same way as the second term is related to the first term.

5 Innocent : Guilty :: Moisten : ?

- Ans
- 1. Drench
 - 2. Dried
 - 3. Desire
 - 4. Wet

Question ID : 9895803625
Chosen Option : 2

Q.2
6 Who started the newspaper Mook Nayak in the year 1920?

- Ans
1. Dadabhai Naoroji
 2. Jyotiba Phule
 3. B. R Ambedkar
 4. Mahadeo Govind Ranade

Question ID : 9895805012
Chosen Option : 3

Q.2
7 What was the official mascot of the third Asian Para Games 2018?

- Ans
1. Momo
 2. Appu
 3. Ezomon
 4. Chim Yen

Question ID : 9895805005
Chosen Option : 3

Q.2
8 Which part protects an unopened flower?

- Ans
1. Sepal
 2. Stamen
 3. Petal
 4. Anther

Question ID : 9895805017
Chosen Option : 3

Q.2
9 Which schedule was added to the Indian Constitution in 1992 as a result of 73rd amendment?

- Ans
1. 12th
 2. 9th
 3. 8th
 4. 11th

Question ID : 9895805013
Chosen Option : 1

Q.3
0 Which of the following is a Maharatna that is a central public sector enterprise?

- Ans
1. Hindustan Petroleum Corporation Limited
 2. ONGC Videsh Limited
 3. NTPC Limited
 4. PEC limited

Question ID : 9895805024
Chosen Option : 4

Q.3 The 2009 Nobel Peace prize was awarded to _____ for his extraordinary efforts to strengthen International
1 Diplomacy.

- Ans
- 1. Justin Trudeau
 - 2. Kofi Annan
 - 3. Barack Obama
 - 4. Dalai Lama

Question ID : 9895805004
Chosen Option : 1

Q.3 What is the party symbol of Communist Party of India (M)?
2

- Ans
- 1. Elephant
 - 2. Lotus flower
 - 3. Broom
 - 4. Hammer and Sickle

Question ID : 9895805016
Chosen Option : 2

Q.3 Name the bacteria that causes dysentery.
3

- Ans
- 1. Shigella
 - 2. Vibrio Cholerae
 - 3. Streptococcus pyogenes bacteria
 - 4. Mycobacterium tuberculosis

Question ID : 9895805020
Chosen Option : 3

Q.3 Which of the below is an alloy of mercury?
4

- Ans
- 1. Brass
 - 2. Nichrome
 - 3. Stellite
 - 4. Amalgam

Question ID : 9895805008
Chosen Option : 4

Q.3 Who founded the Swaraj Party?
5

- Ans
- 1. C.R. Das and Motilal Nehru
 - 2. Bal Gangadhar Tilak and Lala Lajpat Rai
 - 3. Mahatma Gandhi and B.R. Ambedkar
 - 4. Jawaharlal Nehru and Motilal Nehru

Question ID : 9895805007
Chosen Option : 2

Q.3 When did the Indian Constituent assembly adopt the constitution?
6

Ans

- 1. 26 November 1949
- 2. 26 January 1950
- 3. 26 November 1950
- 4. 26 January 1949

Question ID : 9895805023
Chosen Option : 3

Q.3
7 Liquefied petroleum gas consists of:

- Ans
- 1. Hexane and benzene
 - 2. Nitrogen and ethane
 - 3. Propane and butane
 - 4. Nonane and octane

Question ID : 9895805009
Chosen Option : 4

Q.3
8 Who led the revolt of 1857 in the city of Kanpur?

- Ans
- 1. Rani Lakshmi Bai
 - 2. Nana Sahib
 - 3. Begum Hazrat Mahal
 - 4. Kunwar Singh

Question ID : 9895805019
Chosen Option : 2

Q.3
9 Which of the following is NOT the role of Food Corporation of India?

- Ans
- 1. Ensuring that farmers are not forced to sell their produce below MSP
 - 2. Making laws related to agricultural credit and indebtedness
 - 3. Procurement of buffer stock
 - 4. Setting up purchase centres to buy produce from the farmers

Question ID : 9895805025
Chosen Option : 3

Q.4
0 Who is the winner of Man Booker Award 2018 for the book Milkman?

- Ans
- 1. Anna Burns
 - 2. Daisy Johnson
 - 3. Richard Powers
 - 4. Robin Robertson

Question ID : 9895805006
Chosen Option : 2

Q.4
1 Which Chinese business tycoon (also the richest man of China) recently stepped down from Alibaba, the company he co-founded?

- Ans 1. Jack Ma
 2. Lei Jun
3. Daniel Zhang
4. Guo Guangchang

Question ID : 9895805026
Chosen Option : 2

Q.4 Which major cities of the country are connected by the Golden quadrilateral super highways?

2

- Ans 1. Delhi-Varanasi-Chennai-Pune-Delhi
2. Delhi-Dhanbad-Vishakapatnam-Surat-Delhi
 3. Delhi-Kolkata-Chennai-Mumbai-Delhi
4. Delhi-Kolkata-Angola-Mumbai-Delhi

Question ID : 9895805003
Chosen Option : 2

Q.4 The new year celebrated by Maharashtra Hindus is referred to by which name?

3

- Ans 1. Ugadi
 2. Puthando
 3. Vishu
 4. Gudi Padwa

Question ID : 9895805010
Chosen Option : 3

Q.4 What does road density indicate?

4

- Ans 1. The length of road per 100 sq. km of land area
2. The length of road per 1000 km of land area
3. The length of road per 1000 sq. km of land area
4. The length of road per 100 km of land area

Question ID : 9895805018
Chosen Option : 4

Q.4 Out of the given options, which crop grows in black soil?

5

- Ans 1. Cashew nut
 2. Sugarcane
 3. Tea
 4. Cotton

Question ID : 9895805015
Chosen Option : 3

Q.4 Pandavani is a folk singing style popular in the state of:

6

- Ans 1. Bihar

- 2. Jharkhand
- 3. Chattisgarh
- 4. Uttar Pradesh

Question ID : 9895805014
Chosen Option : 1

Q.4
7 The southern most Jyotirlinga temple is located in which Indian state?

- Ans
- 1. Andhra Pradesh
 - 2. Karnataka
 - 3. Tamil Nadu
 - 4. Kerala

Question ID : 9895805021
Chosen Option : 4

Q.4
8 Setting up of which of these is associated with White Revolution in India?

- Ans
- 1. Mother Dairy
 - 2. Paras
 - 3. Saras
 - 4. Amul

Question ID : 9895805027
Chosen Option : 2

Q.4
9 _____ is a chemical process or a reaction between fuel (hydrocarbon) and oxygen, producing heat and light energy resulting in a flame.

- Ans
- 1. Convection
 - 2. Carbonisation
 - 3. Combustion
 - 4. Conduction

Question ID : 9895805011
Chosen Option : 3

Q.5
0 Who was awarded the 'FIFA Player of the Year 2018'?

- Ans
- 1. Mohammed Salah
 - 2. Cristiano Ronaldo
 - 3. Luka Modric
 - 4. Lionel Messi

Question ID : 9895805022
Chosen Option : 1

Q.5
1 The value of $\left(\frac{7}{8} \div 5\frac{1}{4} \times 7\frac{1}{5} - \frac{3}{20} \text{ of } \frac{2}{3}\right) \div \frac{1}{2} + \left(\frac{3}{5} \times 7\frac{1}{2} + \frac{2}{3} \div \frac{8}{15}\right)$ is equal to $7 + k$, where $k =$

- Ans
- 1. $\frac{3}{5}$
 - 2. $\frac{1}{5}$

3. $\frac{1}{20}$

4. $\frac{19}{20}$

Question ID : 9895805129
Chosen Option : 3

Q.5 A can complete $33\frac{1}{2}\%$ of a work in 5 days and B can complete 40% of the same work in 10 days. They work together for 5 days and then B left the work. A alone will complete the remaining work in:

- Ans
1. $7\frac{1}{2}$ days
2. 5 days
3. 7 days
4. $5\frac{1}{2}$ days

Question ID : 9895805148
Chosen Option : 4

Q.5
3 The value of $\frac{[5.7 + 1.9 \text{ of } 0.4] + 1.5}{1.5 + [12.5 - (7.5 - 2.5)]}$ is:

- Ans
1. 0.25
2. 0.5
3. 25
4. 5

Question ID : 9895805130
Chosen Option : 1

Q.5 If A is 75% more than B, C is 40% less than D and D is 20% more than A, then which one of the following is true?

- Ans
1. $63C = 50B$
2. $25B = 21C$
3. $21B = 25C$
4. $50C = 63B$

Question ID : 9895805136
Chosen Option : 1

Q.5 The average weight of all the students in a class was 45.5 kg. Later on 5 students weighing 44.6 kg, 43.4 kg, 44 kg, 45.5 kg and 43.5 kg leave the class. As a result, the average weight of the remaining students increases by 500g. What was the number of students in the class, initially?

- Ans
1. 18
2. 20
3. 16
4. 21

Question ID : 9895805132
Chosen Option : 4

Q.5 In finding the HCF of two numbers by division method, the last divisor is 174 and the quotient are 1, 7 and 2, respectively. If the sum of the two numbers is divided by 11, the remainder is:

- Ans
- 1.

2. 8

3. 1

4. 7

Question ID : 9895805128
Chosen Option : 3

Q.5 A person sells an article at a certain price. What is his gain percent, if by selling it at 80% of that price, he loses 16%?
7

Ans 1. 4

2. 4.5

3. 5

4. 6

Question ID : 9895805134
Chosen Option : 1

Q.5 Study the following table and answer questions:
8

Number of candidates appeared in an examination from five cities:

Cities	Number of candidate (in thousands)	Ratio of candidates passed and failed
A	75	3 : 2
B	124	16 : 15
C	108	7 : 5
D	81	5 : 4
E	148	17 : 20

The number of candidates appearing for the examination from city D is what percent of the total number of candidates failed in cities A and B?

Ans 1. 72

2. 87

3. 80

4. 90

Question ID : 9895805152
Chosen Option : 4

Q.5 A shopkeeper allows 20% discount on the marked price of an article and still makes a profit of 28%. If he sells it at 12.5% discount on the marked price, then his gain percent is:
9

Ans 1. 20.5

2. 24.6

3. 36

4. 40

Question ID : 9895805133
Chosen Option : 1

Q.6 A boat goes 2 km upstream and 3 km downstream in 45 minutes while it goes 3 km upstream and 9 km downstream in 90 minutes. What is the speed (in km/hr) of boat when going downstream?
0

Ans 1. 9

2. 10.5

3. 12

4. 9.5

Question ID : 9895805146
Chosen Option : 4

Q.6
1 What is the compound interest on a sum of ₹7500 for $2\frac{3}{4}$ years at 8% p.a., the interest being compounded yearly?
(nearest to an integer)

- Ans
- 1. ₹1248
 - 2. ₹1773
 - 3. ₹1348
 - 4. ₹1783

Question ID : 9895805141
Chosen Option : 3

Q.6
2 If x is the fourth proportional to 36, 48 and 15, and 4.2, y , 9 and 13.5 are in proportion, then the difference between y and x is:

- Ans
- 1. 13.7
 - 2. 16.4
 - 3. 15.6
 - 4. 14.8

Question ID : 9895805137
Chosen Option : 1

Q.6
3 The driver of a mini bus driving at 82 km/hr locates a motor bike 150 m ahead of him. After 20 seconds, the motorbike was 100 m behind the bus. The speed (in km/hr) of the motorbike is:

- Ans
- 1. 39
 - 2. 37
 - 3. 35
 - 4. 40

Question ID : 9895805147
Chosen Option : 4

Q.6
4 9 men and 12 women can complete a work in 4 days, whereas 3 men and 6 women can complete it in 10 days. The number of days in which 15 women will complete the work is:

- Ans
- 1. 9
 - 2. 10
 - 3. 12
 - 4. 8

Question ID : 9895805149
Chosen Option : 2

Q.6
5 The average of 13 numbers is 65. The average of first three numbers is 63 and that of next numbers is 64.5. The 11th number is 2 more than the 12th number but less than the 13th by 2.5. What is the average of 11th and 12th number?

- Ans
- 1. 67.5
 - 2. 67
 - 3. 65.5
 - 4. 65

Question ID : 9895805131
Chosen Option : 4

Q.6
6 An alloy X contains by weight copper and tin in the ration 7 : 3 and alloy Y contain copper and tin in the ratio 3 : 2. X and Y are taken in the ratio 4 : 1 and melted to form alloy Z. The percentage of copper in alloy Z is:

- Ans
- 1.

2. 56

3. 65

4. 68

Question ID : 9895805139
Chosen Option : 2

Q.6 The radius of the base of a conical tent is 5 m and its height is 12 m. how many metres of canvas of width 5 metres will
7 be required to make it? (use $\pi = \frac{22}{7}$)

Ans 1. $42\frac{3}{7}$

2. $40\frac{6}{7}$

3. $40\frac{3}{7}$

4. $42\frac{5}{7}$

Question ID : 9895805145
Chosen Option : 2

Q.6 The area of a circular park is 3π times the area of a triangular field with sides 20 m, 20 m and 24 m. What is the
8 perimeter (nearest to an integer) of the circular park?

Ans 1. 151

2. 156

3. 162

4. 153

Question ID : 9895805143
Chosen Option : 3

Q.6 Study the following table and answer questions:
9

Number of candidates appeared in an examination from five cities:

Cities	Number of candidate (in thousands)	Ratio of candidates passed and failed
A	75	3 : 2
B	124	16 : 15
C	108	7 : 5
D	81	5 : 4
E	148	17 : 20

The number of cities, in which pass percentage of candidates is more than 55%, is:

Ans 1. 3

2. 2

3. 4

4. 1

Question ID : 9895805151
Chosen Option : 2

Q.7 The median of the observations 10, 11, 13, 17, $x + 2$, $x + 4$, 31, 33, 36, 42, arranged in ascending order 24. What is the
0 mean of the data?

- Ans 1. 25.2
 2. 24.1
 3. 25.4
 4. 23.9

Question ID : 9895805142
Chosen Option : 4

Q.7
1 A certain sum amounts to ₹11760 in $2\frac{1}{2}$ years at 9% p.a. simple interest. What will be the simple interest on the same sum for $4\frac{2}{3}$ years at 15% p.a.?

- Ans 1. ₹6336
 2. ₹6363
 3. ₹6436
 4. ₹6433

Question ID : 9895805140
Chosen Option : 2

Q.7
2 Water in a canal 3 m wide and 1.2 m deep, is flowing with the velocity of 10 km/h. how much area (in hectares) will it irrigate in half an hour, if 9 cm of standing water is needed?

- Ans 1. 20
 2. 18.8
 3. 21
 4. 20.4

Question ID : 9895805144
Chosen Option : 2

Q.7 Study the following table and answer questions:

3

Number of candidates appeared in an examination from five cities:

Cities	Number of candidate (in thousands)	Ratio of candidates passed and failed
A	75	3 : 2
B	124	16 : 15
C	108	7 : 5
D	81	5 : 4
E	148	17 : 20

The ratio of the total number of candidates who passed from cities A and C to that who failed in cities B and E is:

- Ans 1. 7 : 9
 2. 53 : 66
 3. 9 : 11
 4. 4 : 7

Question ID : 9895805150
Chosen Option : 2

Q.7
4 Ritu sold an article at a loss of 12%. Had she sold it for ₹55.80 more, she would have gained 13%. To gain 10%, she must sell it for ₹:

- Ans 1. 274.80
 2. 280.46
 3. 245.52
 4. 271.60

Question ID : 9895805135
Chosen Option : 3

Q.7 A sum of 3392 is divided among A, B, C and D such that the ratio for shares of A and B is 2 : 5, that of B and C is 3 : 7 and that of C and D is 5 : 8. What is the share of C?

- Ans
- 1. ₹1060
 - 2. ₹1696
 - 3. ₹848
 - 4. ₹840

Question ID : 9895805138
Chosen Option : 1

Section : English Language

Q.1 Select the most appropriate word to fill in the blank.

Fortunately, only a few _____ were hurt in the train accident.

- Ans
- 1. customers
 - 2. passengers
 - 3. clients
 - 4. vendors

Question ID : 9895804585
Chosen Option : 2

Q.2 Select the option that means the same as the given idiom.

State-of-the-art

- Ans
- 1. Very large
 - 2. Scientific
 - 3. Creatively made
 - 4. Most advanced

Question ID : 9895804587
Chosen Option : 4

Q.3 Select the word which means the same as the group of words given.

One who does not drink alcohol.

- Ans
- 1. vegetarian
 - 2. faithful
 - 3. religious
 - 4. teetotaler

Question ID : 9895804588
Chosen Option : 3

Q.4 Select the antonym of the given word.

MAJOR

- Ans
1. Significant
 2. Leading
 3. Powerless
 4. Minor

Question ID : 9895804583
Chosen Option : 4

Q.5 Select the most appropriate option to fill in the blank.

I wish to travel the whole world, but I _____ afford it.

- Ans
1. shouldn't
 2. wouldn't
 3. can't
 4. won't

Question ID : 9895804572
Chosen Option : 3

Q.6 From the given options, identify the segment in the sentence which contains the grammatical error.

I know the most easiest way to solve this problem.

- Ans
1. I know
 2. most easiest
 3. to solve
 4. this problem

Question ID : 9895804566
Chosen Option : 1

Q.7 Select the synonym of the given word.

RARELY

- Ans
1. Usually
 2. Often
 3. Seldom
 4. Frequently

Question ID : 9895804580
Chosen Option : 1

Q.8 Select the synonym of the given word.

ANNUAL

- Ans
1. Timely
 2. Routine
 3. Yearly
 4. Basic

Question ID : 9895804581
Chosen Option : 3

Q.9 Select the correctly spelt word.

- Ans
- 1. Eveluasion
 - 2. Evaluation
 - 3. Evaluasion
 - 4. Evaluetion

Question ID : 9895804591
Chosen Option : 3

Q.1 Select the most appropriate option to substitute the underlined segment in the given sentence. If there is no need to substitute it, select No improvement.

The Constitution of India was prepared after a thorough study of constitutions of various countries.

- Ans
- 1. with a thorough
 - 2. before a thorough
 - 3. in a thorough
 - 4. No improvement

Question ID : 9895804570
Chosen Option : 4

Q.1 Select the most appropriate option to fill in the blank.

_____ you hurry up, you will be late.

- Ans
- 1. Unless
 - 2. Although
 - 3. If
 - 4. Since

Question ID : 9895804573
Chosen Option : 3

Q.1 Select the most appropriate option to substitute the underlined segment in the given sentence. If there is no need to substitute it, select No improvement.

Much of the people in the train were asleep at the time of the accident.

- Ans
- 1. Little of the people
 - 2. No improvement
 - 3. Most of the people
 - 4. More of the people

Question ID : 9895804571
Chosen Option : 1

Q.1 Select the most appropriate word to fill in the blank.

He is six feet _____.

- Ans
- 1. long

2. high

3. tall

4. short

Question ID : 9895804584
Chosen Option : 2

Q.1 Select the most appropriate option to substitute the underlined segment in the given sentence. If there is no need to substitute it, select No improvement.

The terrain of India is make of mountains, plateaus and plains.

Ans 1. No improvement

2. is made of

3. is making of

4. is makes of

Question ID : 9895804569
Chosen Option : 3

Comprehension:

In the following passage some words have been deleted. Fill in the blanks with the help of the alternatives given.

The sky was always a deep sapphire blue. The snow was hard and only by cutting steps in (1) _____ we were able to walk. A false move would have been (2) _____. Stopping at every step, (3) _____ on our axes, we tried to (4) _____ down our hearts, which were (5) _____ as though they would burst.

SubQuestion No : 15

Q.1 Select the most appropriate option that will fill in the blank number 1.

Ans 1. this

2. that

3. them

4. it

Question ID : 9895804575
Chosen Option : 3

Comprehension:

In the following passage some words have been deleted. Fill in the blanks with the help of the alternatives given.

The sky was always a deep sapphire blue. The snow was hard and only by cutting steps in (1) _____ we were able to walk. A false move would have been (2) _____. Stopping at every step, (3) _____ on our axes, we tried to (4) _____ down our hearts, which were (5) _____ as though they would burst.

SubQuestion No : 16

Q.1 Select the most appropriate option that will fill in the blank number 2.

Ans

- 1. danger
- 2. fatal
- 3. disaster
- 4. final

Question ID : 9895804576
Chosen Option : 4

Comprehension:

In the following passage some words have been deleted. Fill in the blanks with the help of the alternatives given.

The sky was always a deep sapphire blue. The snow was hard and only by cutting steps in (1) _____ we were able to walk. A false move would have been (2) _____. Stopping at every step, (3) _____ on our axes, we tried to (4) _____ down our hearts, which were (5) _____ as though they would burst.

SubQuestion No : 17

Q.1
7 Select the most appropriate option that will fill in the blank number 3.

- Ans
- 1. leans
 - 2. leaned
 - 3. leaning
 - 4. lean

Question ID : 9895804577
Chosen Option : 4

Comprehension:

In the following passage some words have been deleted. Fill in the blanks with the help of the alternatives given.

The sky was always a deep sapphire blue. The snow was hard and only by cutting steps in (1) _____ we were able to walk. A false move would have been (2) _____. Stopping at every step, (3) _____ on our axes, we tried to (4) _____ down our hearts, which were (5) _____ as though they would burst.

SubQuestion No : 18

Q.1
8 Select the most appropriate option that will fill in the blank number 4.

- Ans
- 1. compose
 - 2. calm
 - 3. pacify
 - 4. soothe

Question ID : 9895804578
Chosen Option : 3

Comprehension:

In the following passage some words have been deleted. Fill in the blanks with the help of the alternatives given.

The sky was always a deep sapphire blue. The snow was hard and only by cutting steps in (1) _____ we were able to walk. A false move would have been (2) _____. Stopping at every step, (3) _____ on our axes, we tried to (4) _____ down our hearts, which were (5) _____ as though they would burst.

SubQuestion No : 19

Q.1
9 Select the most appropriate option that will fill in the blank number 5.

- Ans
1. thumping
 2. crushing
 3. thrashing
 4. moving

Question ID : 9895804579
Chosen Option : 4

Q.2
0 Select the word which means the same as the group of words given.

One who cannot read or write.

- Ans
1. ignoble
 2. illegible
 3. illiterate
 4. ignorant

Question ID : 9895804589
Chosen Option : 1

Q.2
1 Select the antonym of the given word.

URBAN

- Ans
1. Developed
 2. Rural
 3. Modern
 4. Backward

Question ID : 9895804582
Chosen Option : 1

Q.2
2 From the given options, identify the segment in the sentence which contains the grammatical error.

He is a young man about twenty-five years but very learned.

- Ans
1. He is
 2. a young man
 3. but very learned.
 4. about twenty-five years

Q.2
3 Select the option that means the same as the given idiom.

To keep one's fingers crossed

- Ans 1. To wish for the best
 2. To be very happy
 3. To try very hard
 4. To be frightened

Q.2
4 Select the correctly spelt word.

- Ans 1. Clarence
 2. Clearance
 3. Clearence
 4. Cleerance

Q.2
5 From the given options, identify the segment in the sentence which contains the grammatical error.

My sister tried to tempt me with sweets so that I ought not tell our parents about the vase she broke.

- Ans 1. with sweets
 2. ought not tell
 3. tried to tempt me
 4. about the vase

Section : Hindi Language

Q.1 दिए गए वाक्य का वह भाग ज्ञात करें जिसमें कोई त्रुटि है।

संवेदना के बिना कोई भाषा जीवंत नहीं हो सकता।

- Ans 1. कोई भाषा
 2. संवेदना के बिना
 3. हो सकता।
 4. जीवंत नहीं

Q.2

दिये गये वाक्यांश के लिए एक शब्द दीजिये।

जो आँखों के सामने न हो

- Ans
- 1. समक्ष
 - 2. अपरोक्ष
 - 3. परोक्ष
 - 4. प्रत्यक्ष

Question ID : 9895804924
Chosen Option : --

Q.3 दिये गये वाक्यांश के लिए एक शब्द दीजिये।

जो कभी न मरे

- Ans
- 1. अमर
 - 2. अजर
 - 3. आमरण
 - 4. नजर

Question ID : 9895804925
Chosen Option : --

Q.4 रिक्त स्थान को भरने के लिए उपयुक्त शब्द का चयन करें।

वह _____ तेज भागता है।

- Ans
- 1. सबसे
 - 2. तुमको
 - 3. आपको
 - 4. मुझे

Question ID : 9895804909
Chosen Option : --

Q.5 सही वर्तनी वाले शब्द का चयन करें।

- Ans
- 1. सथावर
 - 2. स्थाबर
 - 3. स्थावर
 - 4. स्थावार

Question ID : 9895804926
Chosen Option : --

Q.6 रिक्त स्थान को भरने के लिए उपयुक्त शब्द का चयन करें।

यही मेरी और _____ परिवार की कामना है।

- Ans
- 1. अपने

2. हमारी
3. इसने
4. मेरे

Question ID : 9895804910
Chosen Option : --

Q.7 दिए गए वाक्य में रेखांकित खंड को प्रतिस्थापित करने के लिए सबसे उपयुक्त विकल्प का चयन करें।

उसे पक्का विश्वास था कि बड़े व्यक्ति ने कोई अपराध किया है।

Ans

1. पक्का विश्वास थे
2. पक्के विश्वास था
3. पक्की विश्वास था
4. पक्का विश्वास था

Question ID : 9895804906
Chosen Option : --

Comprehension:

निम्नलिखित गद्यांश के रिक्त स्थानों की पूर्ति गद्यांश के नीचे दिए गए प्रश्नों के अनुसार कीजिए-

जननी और जन्मभूमि _____ (1) हैं। _____ (2) हमें जन्म देती है और मातृभूमि अपने अन्न-जल से हमारा पालन-पोषण करती है। इसीलिए माँ के ऋण से _____ (3) होना संभव नहीं है। धरती की _____ (4) में लोट-पोट कर हम बड़े होते हैं। तभी तो कहा गया है, जननी और जन्मभूमि _____ (5) से भी श्रेष्ठ है।

SubQuestion No : 8

Q.8 गद्यांश में संकेतित रिक्त स्थान (1) के लिए उपयुक्त शब्द होगा।

Ans

1. महान
2. तुच्छ
3. उत्तम
4. हीन

Question ID : 9895804913
Chosen Option : --

Comprehension:

निम्नलिखित गद्यांश के रिक्त स्थानों की पूर्ति गद्यांश के नीचे दिए गए प्रश्नों के अनुसार कीजिए-

जननी और जन्मभूमि _____ (1) हैं। _____ (2) हमें जन्म देती है और मातृभूमि अपने अन्न-जल से हमारा पालन-पोषण करती है। इसीलिए माँ के ऋण से _____ (3) होना संभव नहीं है। धरती की _____ (4) में लोट-पोट कर हम बड़े होते हैं। तभी तो कहा गया है, जननी और जन्मभूमि _____ (5) से भी श्रेष्ठ है।

SubQuestion No : 9

Q.9 गद्यांश में संकेतित रिक्त स्थान (2) के लिए उपयुक्त शब्द होगा।

- Ans 1. माता
 2. नदी
 3. स्त्री
 4. धरती

Question ID : 9895804914
Chosen Option : --

Comprehension:

निम्नलिखित गद्यांश के रिक्त स्थानों की पूर्ति गद्यांश के नीचे दिए गए प्रश्नों के अनुसार कीजिए-

जननी और जन्मभूमि _____ (1) हैं। _____ (2) हमें जन्म देती है और मातृभूमि अपने अन्न-जल से हमारा पालन-पोषण करती है। इसीलिए माँ के ऋण से _____ (3) होना संभव नहीं है। धरती की _____ (4) में लोट-पोट कर हम बड़े होते हैं। तभी तो कहा गया है, जननी और जन्मभूमि _____ (5) से भी श्रेष्ठ है।

SubQuestion No : 10

Q.10 गद्यांश में संकेतित रिक्त स्थान (3) के लिए उपयुक्त शब्द होगा।

- Ans 1. ऋणी
 2. उऋण
 3. कर्जदार
 4. उत्तीर्ण

Question ID : 9895804915
Chosen Option : --

Comprehension:

निम्नलिखित गद्यांश के रिक्त स्थानों की पूर्ति गद्यांश के नीचे दिए गए प्रश्नों के अनुसार कीजिए-

जननी और जन्मभूमि _____ (1) हैं। _____ (2) हमें जन्म देती है और मातृभूमि अपने अन्न-जल से हमारा पालन-पोषण करती है। इसीलिए माँ के ऋण से _____ (3) होना संभव नहीं है। धरती की _____ (4) में लोट-पोट कर हम बड़े होते हैं। तभी तो कहा गया है, जननी और जन्मभूमि _____ (5) से भी श्रेष्ठ है।

SubQuestion No : 11

Q.1 गद्यांश में संकेतित रिक्त स्थान (4) के लिए उपयुक्त शब्द होगा।

- Ans
- 1. रजत
 - 2. मकरंद
 - 3. पराग
 - 4. रज

Question ID : 9895804916
Chosen Option : --

Comprehension:

निम्नलिखित गद्यांश के रिक्त स्थानों की पूर्ति गद्यांश के नीचे दिए गए प्रश्नों के अनुसार कीजिए-

जननी और जन्मभूमि _____ (1) हैं। _____ (2) हमें जन्म देती है और मातृभूमि अपने अन्न-जल से हमारा पालन-पोषण करती है। इसीलिए माँ के ऋण से _____ (3) होना संभव नहीं है। धरती की _____ (4) में लोट-पोट कर हम बड़े होते हैं। तभी तो कहा गया है, जननी और जन्मभूमि _____ (5) से भी श्रेष्ठ है।

SubQuestion No : 12

Q.1 गद्यांश में संकेतित रिक्त स्थान (5) के लिए उपयुक्त शब्द होगा।

- Ans
- 1. पृथ्वी
 - 2. स्वर्ग
 - 3. सूर्य
 - 4. आकाश

Question ID : 9895804917

Chosen Option : --

Q.1
3 निम्नलिखित में से उस विकल्प का चयन करें जो 'आस्तीन का साँप' मुहावरे का अर्थ व्यक्त करता है।

Ans

1. धोखेबाज मित्र
2. सच्चा मित्र
3. आस्तीन से साँप निकालना
4. आस्तीन में साँप पालना

Question ID : 9895804922

Chosen Option : --

Q.1
4 दिए गए वाक्य का वह भाग जात करें जिसमें कोई त्रुटि है।

भारत इक्कीसवीं सदियों में बेरोजगारी और गरीबी जैसी समस्याओं से मुक्ति पा सकेगा।

Ans

1. मुक्ति पा सकेगा।
2. बेरोजगारी और गरीबी
3. जैसी समस्याओं से
4. भारत इक्कीसवीं सदियों में

Question ID : 9895804904

Chosen Option : --

Q.1
5 रिक्त स्थान को भरने के लिए उपयुक्त शब्द का चयन करें।

बिजली _____ पर बारिश नहीं हुई।

Ans

1. भड़की
2. नाची
3. कड़की
4. जागी

Question ID : 9895804911

Chosen Option : --

Q.1
6 दिए गए वाक्य में रेखांकित खंड को प्रतिस्थापित करने के लिए सबसे उपयुक्त विकल्प का चयन करें।

दिल्ली से मुंबई आने वाला ट्रेन दो घंटे की देरी से आएगी।

Ans

1. आनी वाला ट्रेन
2. आने वाली ट्रेन
3. आने वाला ट्रेन
4. आना वाली ट्रेन

Question ID : 9895804907

Chosen Option : --

Q.1
7

रिक्त स्थान को भरने के लिए उपयुक्त शब्द का चयन करें।

कुर्सी के _____ मेरी कलम गिर गई।

Ans

1. भीतर
2. दूर
3. अंदर
4. नीचे

Question ID : 9895804908
Chosen Option : --

Q.1
8 दिए गए वाक्य का वह भाग ज्ञात करें जिसमें कोई त्रुटि है।

आत्मा को स्वस्थ रखने के लिए शरीर का स्वस्थ होनी अनिवार्य है।

Ans

1. आत्मा को
2. शरीर का स्वस्थ होनी
3. अनिवार्य है।
4. स्वस्थ रखने के लिए

Question ID : 9895804902
Chosen Option : --

Q.1
9 दिए गए शब्द का विलोम चुनें।

आधुनिक

Ans

1. प्राचीन
2. अधुनातन
3. इहलोक
4. परलोक

Question ID : 9895804918
Chosen Option : --

Q.2
0 दिए गए शब्द का विलोम चुनें।

निःस्वार्थ

Ans

1. समर्थ
2. परोपकार
3. अंतरात्मा
4. स्वार्थ

Question ID : 9895804919
Chosen Option : --

Q.2
1

दिए गए शब्द के पर्यायवाची शब्द का चयन करें।

पल

- Ans 1. क्षण
 2. रात
 3. दिन
 4. मन

Question ID : 9895804921
Chosen Option : --

Q.2
2 दिए गए शब्द के पर्यायवाची शब्द का चयन करें।

कमर

- Ans 1. हाथ
 2. कंधा
 3. पैर
 4. कटि

Question ID : 9895804920
Chosen Option : --

Q.2
3 निम्नलिखित में से उस विकल्प का चयन करें जो 'घोड़े बेचकर सोना' मुहावरे का अर्थ व्यक्त करता है।

- Ans 1. घोड़े बेचकर सोना खरीदना
 2. घोड़े बेचना
 3. निश्चिंत होकर सोना
 4. हलकी नींद में सोना

Question ID : 9895804923
Chosen Option : --

Q.2
4 सही वर्तनी वाले शब्द का चयन करें।

- Ans 1. प्रासद
 2. प्रसाद
 3. परसाद
 4. प्रसद

Question ID : 9895804927
Chosen Option : --

Q.2
5 दिए गए वाक्य में रेखांकित खंड को प्रतिस्थापित करने के लिए सबसे उपयुक्त विकल्प का चयन करें।

छुट्टी का घंटा बजते ही, बच्चों के चेहरों से खिलखिलाहट आ जाती है।

- Ans 1. बच्चों के चेहरे को
 2. बच्चों के चेहरों पर
 3. बच्चों के चेहरे ने

✗ बच्चों के चेहरों को