

**SSC
GD**

Previous Year Paper
16 Nov 2021 Shift 1

Exam Date	16/11/2021
Exam Time :	9:00 AM - 10:30 AM
Subject	Constable GD 2021

Section : Part A General Intelligence and Reasoning

Q.1 Five friends, P, Q, R, S and T are sitting in a row facing south. Q is sitting in the centre position. P is sitting at the west end. T and R are sitting on one side of Q. Two persons are sitting between P and R. Who is sitting between Q and P?

- Ans
- 1. Q
 - 2. T
 - 3. S
 - 4. R

Question ID : 65497828355
Status : Answered
Chosen Option : 3

Q.2 Select the option that is related to the third term in the same way as the second term is related to the first term.

Bhubaneswar : Odisha :: Aizawl : ?

- Ans
- 1. Mizoram
 - 2. Meghalaya
 - 3. Manipur
 - 4. Tripura

Question ID : 65497828354
Status : Answered
Chosen Option : 1

Q.3 Select the number from among the given options that can replace the question mark (?) in the following series.

19, 23, 32, 48, 73, ?

- Ans
- 1. 109
 - 2. 108
 - 3. 111
 - 4. 103

Question ID : 65497828351
Status : Answered
Chosen Option : 1

Q.4 Study the given pattern carefully and select the number that can replace the question mark (?) in it.

13 26 39
30 42 ?
17 16 15

- Ans 1. 40
 2. 45
 3. 54
 4. 60

Question ID : 65497828341

Status : Not Attempted and
Marked For Review

Chosen Option : --

Q.5 In a certain code language, 'ARROW' is written as 'FOOSE' and 'GERM' is written as 'THOR'. How will 'MOWER' be written in that language?

- Ans 1. SHORE
 2. ROSHE
 3. RSEHO
 4. HORSE

Question ID : 65497828339

Status : Answered

Chosen Option : 3

Q.6 Select the combination of letters that when sequentially placed in the blanks of the given series will complete the series.

C 2 _ X 2 C C _ X X 2 _ C 2 _ X _ C

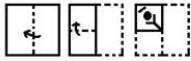
- Ans 1. C2X2X
 2. X2CX2
 3. AXX2C
 4. XCX2C

Question ID : 65497828350

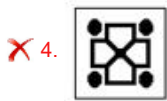
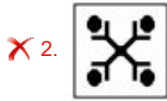
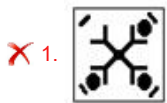
Status : Answered

Chosen Option : 2

Q.7 The sequence of folding a piece of paper and the manner in which the folded paper has been cut is shown in the following figures. How would this paper look when unfolded?



Ans



Question ID : 65497828343
 Status : Answered
 Chosen Option : 3

Q.8 Select the letter-cluster from among the given options that can replace the question mark (?) in the following series.

SKH, PMG, MOF, JQE, ?

Ans 1. GSD

2. SDF

3. GTD

4. HSD

Question ID : 65497828353
 Status : Answered
 Chosen Option : 1

Q.9 Four letter-clusters have been given, out of which three are alike in some manner and one is different. Select the letter-cluster that is different.

Ans 1. HIJ

2. QRS

3. DEF

4. NMP

Question ID : 65497828357
 Status : Answered
 Chosen Option : 4

Q.10 Eight friends, A, B, C, D, E, F, G and H, are sitting in a straight line, all facing the north. F is sitting between D and G. B is sitting between H and A. E is third to the left of G. G is sitting at one of the corners. H is third to the left of C. Who is sitting between A and E?

- Ans
- 1. B
 - 2. H
 - 3. D
 - 4. C

Question ID : 65497828344
Status : Answered
Chosen Option : 4

Q.11 Two different positions of the same dice marked with the letters/symbols X, S, Y, &, Z and @ are shown. Select the letter/symbol that will be on the face opposite to the face having the symbol S.



- Ans
- 1. &
 - 2. Z
 - 3. @
 - 4. X

Question ID : 65497828347
Status : Answered
Chosen Option : 1

Q.12 In a certain code language, 'India is my country' means '8573', 'Sam is my friend' means '8634', 'My country' means '73' and 'Team India' means '59'. What number is the code for 'Country'?

- Ans
- 1. 5
 - 2. 7
 - 3. 8
 - 4. 3

Question ID : 65497828358
Status : Answered
Chosen Option : 2

Q.13 'R+S' means 'R is the daughter of S'. 'R-S' means 'R is the husband of S'. 'R x S' means 'R is the brother of S'. If 'T x V + Z', then which of the following options is true?

- Ans
- 1. T is the uncle of Z.
 - 2. T is the father of Z.
 - 3. T is the son of Z.
 - 4. T is the brother of Z.

Question ID : 65497828363
Status : Answered
Chosen Option : 3

Q.14 Select the correct option that indicates the arrangement of the given words in the order in which they appear in an English dictionary.

1. Prestige
2. Pristine
3. Prescribe
4. Prepaid
5. Premium

- Ans
- 1. 4, 5, 3, 2, 1
 - 2. 5, 3, 4, 1, 2
 - 3. 5, 4, 3, 1, 2
 - 4. 4, 5, 3, 1, 2

Question ID : 65497828349
Status : Answered
Chosen Option : 3

Q.15 Select the option that is related to the third term in the same way as the second term is related to the first term.

BLOCK : LBPKC :: MARGIN : ?

- Ans
- 1. OHQHBL
 - 2. OHBHQL
 - 3. OBHQHL
 - 4. OHHQBL

Question ID : 65497828361
Status : Answered
Chosen Option : 4

Q.16 Select the option in which the given figure is embedded (rotation is NOT allowed).



Ans

- 1.
- 2.
- 3.
- 4.

Question ID : 65497828348
Status : Answered
Chosen Option : 1

Q.17 Select the number from among the given options that can replace the question mark (?) in the following series.

24, 40, 64, 104, ?, 312

Ans 1. 228

2. 176

3. 154

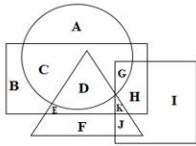
4. 168

Question ID : 65497828359

Status : Answered

Chosen Option : 2

Q.18 In the following Venn diagram, the circle represents 'vegetables', the triangle represents 'roots', the square represents 'hard soil', and the rectangle represents 'summer'. Which of the following letters represents root vegetables that grow in summer but NOT in hard soil?



Ans 1. D

2. K

3. E

4. G

Question ID : 65497828356

Status : Answered

Chosen Option : 1

Q.19 Select the option that is related to the third number in the same way as the second number is related to the first number.

31 : 90 :: 43 : ?

Ans 1. 130

2. 125

3. 102

4. 75

Question ID : 65497828345

Status : Not Attempted and Marked For Review

Chosen Option : --

Q.20 Read the given statements and conclusions carefully. Assuming that the information given in the statements is true, even if it appears to be at variance with commonly known facts, decide which of the given conclusions logically follow(s) from the statements.

Statements:

All blues are whites.
Some whites are greys.

Conclusions:

I. All greys are whites.
II. All greys are blues.

- Ans** 1. Neither conclusion I nor conclusion II follows
 2. Only conclusion I follows
 3. Only conclusion II follows
 4. Both the conclusions follow

Question ID : 65497828340

Status : Answered

Chosen Option : 1

Q.21 When a number is added to its multiple of 5 and its square, the sum of these three numbers is 91. Find the number.

- Ans** 1. 9
 2. 11
 3. 7
 4. 6

Question ID : 65497828342

Status : Not Attempted and Marked For Review

Chosen Option : --

Q.22 In a certain code language, 'CIRCLE' is written as 'DLWAHY'. How will 'SQUARE' be written in that language?

- Ans** 1. TTPNKY
 2. TNZYVY
 3. TTZYNY
 4. TNPYVY

Question ID : 65497828362

Status : Answered

Chosen Option : 3

Q.23 In an imaginary mathematical system, symbol '-' stands for addition, symbol '+' stands for division, symbol 'x' stands for subtraction, and symbol '÷' stands for multiplication. All other rules of mathematics are the same as in the existing system. What is the value of the following expression?

$$240 \times 72 + 8 \div 24 - 6$$

- Ans** 1. 30
 2. 36
 3. 26
 4. 19

Question ID : 65497828346

Status : Answered

Chosen Option : 1

Q.24 Select the correct mirror image of the given combination when the mirror is placed at 'PQ' as shown.



- Ans
- 1. M8VGIJCVF
 - 2. JAQZGIA8M
 - 3. M8VIGJCVF
 - 4. JAQZGIA8M

Question ID : 65497828360
 Status : Answered
 Chosen Option : 4

Q.25 Select the figure from among the given options that can replace the question mark (?) in the following series.



- Ans
- 1.
 - 2.
 - 3.
 - 4.

Question ID : 65497828352
 Status : Answered
 Chosen Option : 3

Q.1 Which of the following Articles of the Constitution of India is related to the promotion of co-operative societies?

- Ans 1. 43A
 2. 43B
 3. 31A
 4. 31B

Question ID : 65497828376
Status : Answered
Chosen Option : 2

Q.2 Which of the following nations was India's top trading partner in the financial year 2019-20?

- Ans 1. China
 2. The US
 3. Mauritius
 4. Japan

Question ID : 65497828365
Status : Not Answered
Chosen Option : --

Q.3 After the death of Guru Gobind Singh in 1708, the Khalsa revolted against the Mughal authority under the leadership of _____.

- Ans 1. Guru Angad
 2. Guru Amar Das
 3. Banda Bahadur
 4. Guru Nanak Dev

Question ID : 65497828385
Status : Not Attempted and Marked For Review
Chosen Option : --

Q.4 Who among the following founded the newspaper 'Sambad Kaumudi'?

- Ans 1. Rash Bihari Bose
 2. Raja Ram Mohan Roy
 3. Shishir Kumar Ghosh
 4. Ishwar Chandra Vidyasagar

Question ID : 65497828366
Status : Not Answered
Chosen Option : --

Q.5 Which of the following set of countries participated in the Malabar Naval Exercise 2020?

- Ans 1. India, Japan and the US
 2. India, Israel and the US
 3. India, Australia, Israel and the US
 4. India, Australia, Japan and the US

Question ID : 65497828375
Status : Not Answered
Chosen Option : --

Q.6 Sarayu river is a tributary of which river?

- Ans 1. Pindar
 2. Bhagirathi
 3. Tons
 4. Sharda

Question ID : 65497828364
Status : Not Answered
Chosen Option : --

Q.7 On 26 January 2019, the Constitution of India completed 69 years of its existence. In these years, it was amended _____ times (as on 12 January 2019).

- Ans 1. 100
 2. 103
 3. 109
 4. 106

Question ID : 65497828386
Status : Answered
Chosen Option : 2

Q.8 Which year marks the beginning of phase 2 of the Swachh Bharat Mission (Grameen)?

- Ans 1. 2020-21
 2. 2019-20
 3. 2018-19
 4. 2021-22

Question ID : 65497828388
Status : Answered
Chosen Option : 2

Q.9 Who among the following represents India in archery?

- Ans 1. Deepika Kumari
 2. Soumyajit Ghosh
 3. Neeraj Chopra
 4. Manika Batra

Question ID : 65497828367
Status : Answered
Chosen Option : 1

Q.10 _____ represents the high point of an eclectic art, which, in the 7th and 8th centuries under the Chalukya dynasty, achieved a harmonious blend of architectural forms from northern and southern India.

- Ans 1. Kochi
 2. Pattadakal
 3. Konark
 4. Bhimbetka

Question ID : 65497828368
Status : Not Answered
Chosen Option : --

Q.11 _____ is known as viticulture.

- Ans
- 1. growing vegetables, flowers and fruits
 - 2. cultivation of grapes
 - 3. breeding of fish
 - 4. rearing of silkworms

Question ID : 65497828382
Status : Not Answered
Chosen Option : --

Q.12 Who among the following is best known for his plays 'Yayati' and 'Tughlaq'?

- Ans
- 1. Viju Khote
 - 2. Shreeram Lagoo
 - 3. Girish Karnad
 - 4. Mohammed Zahur Khayyam

Question ID : 65497828371
Status : Not Answered
Chosen Option : --

Q.13 Faqir Chand Kohli, who passed away in November 2020, was known as the '_____'.

- Ans
- 1. Father of Indian Civil Services
 - 2. Father of Indian Space Programme
 - 3. Father of Indian Prehistory
 - 4. Father of Indian Software (IT) Industry

Question ID : 65497828380
Status : Not Answered
Chosen Option : --

Q.14 In a molecule of water, the ratio of the mass of hydrogen to that of oxygen is:

- Ans
- 1. 1 : 8
 - 2. 1 : 4
 - 3. 1 : 2
 - 4. 1 : 16

Question ID : 65497828370
Status : Marked For Review
Chosen Option : 4

Q.15 Union Minister of Education launched a free mobile app called _____, on 5 September 2020.

- Ans
- 1. EnglishPro
 - 2. Beelinguapp
 - 3. Duolingo
 - 4. Hello Talk

Question ID : 65497828387
Status : Not Answered
Chosen Option : --

Q.16 α particles are doubly charged ions of _____.

- Ans
- 1. lithium
 - 2. beryllium
 - 3. helium
 - 4. hydrogen

Question ID : 65497828369
Status : Not Answered
Chosen Option : --

Q.17 Which of the following institutions started the 'Team Halo' initiative in November 2020?

- Ans
- 1. World Bank
 - 2. United Nations
 - 3. World Health Organization
 - 4. World Trade Organization

Question ID : 65497828377
Status : Not Answered
Chosen Option : --

Q.18 With which of the following sports would you associate the team 'Kerala Blasters'?

- Ans
- 1. Football
 - 2. Badminton
 - 3. Kabaddi
 - 4. Cricket

Question ID : 65497828383
Status : Marked For Review
Chosen Option : 3

Q.19 Which of the following is the traditional bamboo dance of the Mizos?

- Ans
- 1. Moyashai
 - 2. Udoho
 - 3. Cheraw
 - 4. Aaluyattu

Question ID : 65497828378
Status : Not Answered
Chosen Option : --

Q.20 The Third Battle of Panipat between the Marathas and Ahmad Shah Durrani , the ruler of Afghanistan was fought in the year:

- Ans
- 1. 1781
 - 2. 1851
 - 3. 1761
 - 4. 1831

Question ID : 65497828374
Status : Not Answered
Chosen Option : --

Q.21 In November 2020, the Board of Control for Cricket in India (BCCI) announced _____ as Team India's kit sponsor till 2023.

- Ans
- 1. Byju's
 - 2. Nike
 - 3. MPL Sports
 - 4. Oppo

Question ID : 65497828381
Status : Answered
Chosen Option : 3

Q.22 Raja Todar Mal was the Revenue Minister during the reign of which of the following Mughal emperors?

- Ans
- 1. Humayun
 - 2. Shah Jahan
 - 3. Jahangir
 - 4. Akbar

Question ID : 65497828384
Status : Answered
Chosen Option : 4

Q.23 As per calculations done in 2011-2012, the poverty line for a person of rural India got fixed at _____ per month.

- Ans
- 1. ₹816
 - 2. ₹752
 - 3. ₹1,000
 - 4. ₹687

Question ID : 65497828372
Status : Not Answered
Chosen Option : --

Q.24 Five rivers from Punjab (India) enter the river _____ at Mithankot in Pakistan.

- Ans
- 1. Indus
 - 2. Yamuna
 - 3. Ganga
 - 4. Brahmaputra

Question ID : 65497828379
Status : Answered
Chosen Option : 1

Q.25 _____ is a simple device that is used to either break the electric circuit, or to complete it.

- Ans
- 1. Transistor
 - 2. Switch
 - 3. Capacitor
 - 4. Resistor

Question ID : 65497828373
Status : Answered
Chosen Option : 2

Q.1 The perimeter of an equilateral triangle is $36\sqrt{3}$ cm. Find its height.

- Ans
- 1. 18 cm
 - 2. 9 cm
 - 3. 10 cm
 - 4. 6 cm

Question ID : 65497828400
Status : Answered
Chosen Option : 1

Q.2 A person crosses a 1600 m long street in 4 min. What is his speed (in km/h)?

- Ans
- 1. 22
 - 2. 14
 - 3. 20
 - 4. 24

Question ID : 65497828398
Status : Answered
Chosen Option : 4

Q.3 A chair is sold for ₹720 after giving a discount of 10% on its marked price. The cost price of the chair is ₹640. If it is sold at the marked price, then the profit percentage will be:

- Ans
- 1. 30%
 - 2. 20%
 - 3. 18%
 - 4. 25%

Question ID : 65497828407
Status : Answered
Chosen Option : 4

Q.4 What is 12% of 4% of 7% of 2×10^6 ?

- Ans
- 1. 386
 - 2. 583
 - 3. 672
 - 4. 121

Question ID : 65497828403
Status : Answered
Chosen Option : 3

Q.5 A solid metallic rectangular block of dimensions $112\text{ cm} \times 44\text{ cm} \times 25\text{ cm}$ is melted and recast into a cylinder of radius 35 cm. The curved surface area (in cm^2) of the cylinder is: (Take $\pi = \frac{22}{7}$)

- Ans
- 1. 7260
 - 2. 6600
 - 3. 7040
 - 4. 6160

Question ID : 65497828413

Status : **Not Attempted and Marked For Review**

Chosen Option : --

Q.6 Find the value of $45 - 3 \times (4 \text{ of } 6 + 12 \div 3 \times 6 - 4 \times 5) + 6$.

- Ans
- 1. -45
 - 2. -135
 - 3. -33
 - 4. -30

Question ID : 65497828408

Status : **Answered**

Chosen Option : 3

Q.7 By selling 36 m of jute, a shopkeeper gains an amount equal to the selling price of 12 m of jute. Find the gain percentage.

- Ans
- 1. 50%
 - 2. 40%
 - 3. 45%
 - 4. 55%

Question ID : 65497828409

Status : **Answered**

Chosen Option : 1

Q.8 Divide ₹2,760 in to two parts such that when these are invested for 2 and 4 years, respectively, at the rate of 5 % per annum simple interest, the amounts received are equal. What is the second part (in ₹) invested?

- Ans
- 1. 1,100
 - 2. 1,500
 - 3. 1,320
 - 4. 1,440

Question ID : 65497828396

Status : **Not Attempted and Marked For Review**

Chosen Option : --

Q.9 A 725 m long train passes a tunnel 235 m long in 48 seconds. Find the speed of the train.

- Ans**
- 1. 42 km/h
 - 2. 72 km/h
 - 3. 36 km/h
 - 4. 100 km/h

Question ID : 65497828405
Status : Answered
Chosen Option : 2

Q.10 A batsman scored 124 runs, which included 6 boundaries and 10 sixes. What percentage of his total score did he make by running between the wickets?

- Ans**
- 1. $28\frac{19}{31}\%$
 - 2. $24\frac{1}{31}\%$
 - 3. $32\frac{8}{31}\%$
 - 4. $35\frac{3}{31}\%$

Question ID : 65497828390
Status : Answered
Chosen Option : 3

Q.11 The salaries of Ravi and Sumit are in the ratio 4 : 5. If the salary of each is increased by ₹6,000 the new ratio becomes 35 : 40. What will be Sumit's increased salary?

- Ans**
- 1. ₹26,000
 - 2. ₹36,000
 - 3. ₹16,000
 - 4. ₹1,60,000

Question ID : 65497828399
Status : Answered
Chosen Option : 3

Q.12 Anu is four times as good as Binni in completing a task. Together they finish the same task in 7 hours. In how many hours will Anu alone complete the task?

- Ans**
- 1. 22
 - 2. $35/4$
 - 3. $31/4$
 - 4. 24

Question ID : 65497828404
Status : Answered
Chosen Option : 2

Q.13 The number of students in class IX and class X is 42 and 45, respectively. The ratio of the number of boys to girls in classes IX and X is 9 : 5 and 8 : 7, respectively. What is the difference between the total number of boys and the total number of girls in both the classes taken together?

- Ans**
- 1. 11
 - 2. 12
 - 3. 17
 - 4. 15

Question ID : **65497828411**
Status : **Answered**
Chosen Option : **4**

Q.14 P, Q and R can complete a work in 10 days, 20 days and 30 days, respectively, working alone. How soon can the work be completed if P is assisted by Q and R on alternate days?

- Ans**
- 1. $7\frac{1}{17}$ days
 - 2. 9 days
 - 3. 5 days
 - 4. $6\frac{1}{2}$ days

Question ID : **65497828410**
Status : **Not Answered**
Chosen Option : --

Q.15 A loss of $10\frac{1}{2}\%$ gets converted into a profit of $11\frac{3}{5}\%$ when the selling price is increased by ₹132.60. The cost price (in ₹) of the article is:

- Ans**
- 1. 750
 - 2. 800
 - 3. 600
 - 4. 500

Question ID : **65497828391**
Status : **Answered**
Chosen Option : **3**

Q.16 The greatest number that will divide 398, 437 and 5425 leaving 7, 12 and 2 as remainders, respectively, is:

- Ans**
- 1. 11
 - 2. 15
 - 3. 17
 - 4. 19

Question ID : **65497828393**
Status : **Answered**
Chosen Option : **3**

Q.17 If the average of two numbers is 13 and the square root of their product is 12, then the difference between the numbers is:

- Ans** 1. 10
 2. 18
 3. 8
 4. 12

Question ID : 65497828394
Status : Answered
Chosen Option : 1

Q.18 The average of 10 observations is 46. It was realised later that an observation was misread as 42 in place of 142. The correct average is:

- Ans** 1. 52
 2. 46
 3. 58
 4. 56

Question ID : 65497828401
Status : Answered
Chosen Option : 4

Q.19 The ratio of A's and B's salary is 6 : 7. If B's salary is increased by $5\frac{1}{2}\%$, then his total salary becomes ₹1,47,700. The salary (in ₹) of A is:

- Ans** 1. 1,10,000
 2. 1,20,000
 3. 1,40,000
 4. 1,35,000

Question ID : 65497828395
Status : Answered
Chosen Option : 2

Q.20 The certain sum amounts to ₹9,982.50 in $2\frac{1}{2}$ years at 12% p.a., interest compounded 10-monthly. The sum (in ₹) is:

- Ans** 1. 8,500
 2. 7,800
 3. 8,000
 4. 7,500

Question ID : 65497828412
Status : Not Attempted and Marked For Review
Chosen Option : --

Q.21 A nine-digit number $89563x87y$ is divisible by 72. What is the value of $\sqrt{7x - 3y}$?

- Ans
- 1. 8
 - 2. 5
 - 3. 6
 - 4. 4

Question ID : 65497828389
Status : Answered
Chosen Option : 3

Q.22 The value of $3 \times 7 + 5 - 6 \div 3 - 9 + 45 \div 5 \times 4 - 45$ is:

- Ans
- 1. 9
 - 2. 6
 - 3. 7
 - 4. 36

Question ID : 65497828397
Status : Answered
Chosen Option : 2

Q.23 A TV was available for ₹14,500. The price came down to ₹11,890 during the Diwali sale. What is the percentage discount?

- Ans
- 1. 19.56%
 - 2. 19%
 - 3. 18%
 - 4. 17.6%

Question ID : 65497828402
Status : Answered
Chosen Option : 3

Q.24 A shopkeeper sold an article at a gain of 20%. Had he bought it for 20% less than the original cost and sold it for ₹10 less, he would have gained 25%. Then the Cost Price of the article is:

- Ans
- 1. ₹50
 - 2. ₹40
 - 3. ₹60
 - 4. ₹45

Question ID : 65497828406
Status : Answered
Chosen Option : 1

Q.25 A certain sum amounts to ₹13200 after 4 years and to ₹16400 after 8 years at the same rate per cent p.a. at simple interest. The simple interest (in ₹) on the same sum at 10% p.a. for $3\frac{1}{5}$ years will be:

- Ans
- 1. 4000
 - 2. 3200
 - 3. 2500
 - 4. 3500

Question ID : 65497828392
Status : Answered
Chosen Option : 2

Section : Part D English

Q.1 Select the most appropriate synonym of the given word.

Visible

- Ans
- 1. Secret
 - 2. Apparent
 - 3. Vague
 - 4. Hidden

Question ID : 65497828415
Status : Marked For Review
Chosen Option : 2

Q.2 Select the most appropriate option that can substitute the underlined word in the given sentence.

Microwave ovens heat food quickly, anxiously and safely, but do not brown or bake food in the way that conventional ovens do.

- Ans
- 1. angrily
 - 2. efficiently
 - 3. beautifully
 - 4. accidentally

Question ID : 65497828416
Status : Answered
Chosen Option : 2

Q.3 Select the most appropriate option to fill in the blank.

A _____ mind rarely meets a dead end; it continues the search for the answers.

- Ans
- 1. peculiar
 - 2. weird
 - 3. curious
 - 4. strange

Question ID : 65497828419
Status : Answered
Chosen Option : 3

Q.4 The following sentence has been divided into parts. One of them may contain an error. Select the part that contains the error from the given options. If you don't find any error, mark 'No error' as your answer.

She left / hers umbrella / at the office.

- Ans 1. No error
 2. hers umbrella
 3. She left
 4. at the office

Question ID : 65497828414
Status : Answered
Chosen Option : 2

Q.5 Select the option that can be used as a one-word substitute for the given group of words.

A person who knows everything

- Ans 1. Naive
 2. Omniscient
 3. Intelligent
 4. Omnipresent

Question ID : 65497828420
Status : Answered
Chosen Option : 3

Q.6 The following sentence has been split into four segments. Identify the segment that contains a grammatical error.

Mohan told to / Sagar that he / was looking / very pale.

- Ans 1. very pale
 2. Sagar that he
 3. Mohan told to
 4. was looking

Question ID : 65497828422
Status : Answered
Chosen Option : 3

Q.7 Select the most appropriate option that can substitute the underlined segment in the given sentence. If there is no need to substitute it, select 'No substitution required'.

I'm sure he will grab the chance to earn some extra money.

- Ans 1. No substitution required
 2. of earns
 3. to earned
 4. to earns

Question ID : 65497828429
Status : Answered
Chosen Option : 1

Q.8 Select the option that can be used as a one-word substitute for the given group of words.

One who examines a company's financial records

- Ans
- 1. Conductor
 - 2. Author
 - 3. Auditor
 - 4. Instructor

Question ID : 65497828424
Status : Answered
Chosen Option : 3

Q.9 Select the most appropriate option to fill in the blank.

The doctor _____ her to stop eating fried food.

- Ans
- 1. advised
 - 2. considered
 - 3. arranged
 - 4. expressed

Question ID : 65497828421
Status : Answered
Chosen Option : 1

Q.10 Select the most appropriate option that can substitute the underlined segment in the given sentence. If there is no need to substitute it, select 'No substitution required'.

You need to get the cholesterol from out of your system.

- Ans
- 1. out of your system
 - 2. No substitution required
 - 3. out your system
 - 4. from out off your system

Question ID : 65497828430
Status : Answered
Chosen Option : 1

Q.11 Select the most appropriate option to fill in the blank.

A dialogue is a _____ between two or more people.

- Ans
- 1. conversation
 - 2. commission
 - 3. convertible
 - 4. conversion

Question ID : 65497828427
Status : Answered
Chosen Option : 1

Q.12 Select the most appropriate meaning of the given idiom.

Play for time

- Ans
- 1. To do something in the stipulated time
 - 2. To make excuses or do things to gain time
 - 3. To play something for the sake of old times
 - 4. To play music in the time provided

Question ID : 65497828428

Status : Not Attempted and Marked For Review

Chosen Option : --

Q.13 Select the INCORRECTLY spelt word.

- Ans
- 1. Aniversary
 - 2. Felicitate
 - 3. Congratulations
 - 4. Response

Question ID : 65497828418

Status : Answered

Chosen Option : 1

Q.14 Select the most appropriate meaning of the given idiom.

To breathe one's last

- Ans
- 1. To take a major decision
 - 2. To give final verdict
 - 3. To make a plot
 - 4. To die

Question ID : 65497828417

Status : Answered

Chosen Option : 4

Q.15 Select the INCORRECTLY spelt word.

- Ans
- 1. Delivery
 - 2. Stationary
 - 3. Dictionary
 - 4. Voluntary

Question ID : 65497828425

Status : Answered

Chosen Option : 3

Q.16 The following sentence has been split into four segments. Identify the segment that contains a grammatical error.

Neither the manager / nor the employees was / aware of the / shortage of raw materials.

- Ans
- 1. Neither the manager
 - 2. shortage of raw materials
 - 3. nor the employees was
 - 4. aware of the

Question ID : 65497828431
Status : Answered
Chosen Option : 3

Q.17 Select the option that can be used as a one-word substitute for the given group of words.

Anything that leads to death

- Ans
- 1. Scary
 - 2. Serious
 - 3. Fatal
 - 4. Ominous

Question ID : 65497828433
Status : Answered
Chosen Option : 3

Q.18 Select the most appropriate ANTONYM of the given word.

Vital

- Ans
- 1. Critical
 - 2. Trivial
 - 3. Manual
 - 4. Crucial

Question ID : 65497828423
Status : Answered
Chosen Option : 2

Q.19 Select the most appropriate ANTONYM of the given word.

Precarious

- Ans
- 1. Safe
 - 2. Dangerous
 - 3. Uncertain
 - 4. Perilous

Question ID : 65497828426
Status : Not Answered
Chosen Option : --

Q.20 Select the most appropriate SYNONYM of the given word.

Threat

- Ans 1. Suggestion
 2. Proof
 3. Attention
 4. Risk

Question ID : 65497828432

Status : Answered

Chosen Option : 4

Comprehension:

In the following passage, some words have been deleted. Read the passage carefully and select the most appropriate option to fill in each blank.

When the air is clear, the sunset (1)_____ yellow, because the light from the sun has passed a long distance through air and the blue light (2)_____ scattered away. If the air is polluted with small particles, natural (3)_____ otherwise, the sunset will be more red. Sunsets over the sea may also be orange, (4)_____ salt particles in the air. The sky (5)_____ the sun is seen reddened, as well as the light coming directly from the sun.

SubQuestion No : 21

Q.21 Select the most appropriate option to fill in blank no. 1.

- Ans 1. is
 2. appears
 3. has appeared
 4. appeared

Question ID : 65497828435

Status : Answered

Chosen Option : 2

Comprehension:

In the following passage, some words have been deleted. Read the passage carefully and select the most appropriate option to fill in each blank.

When the air is clear, the sunset (1)_____ yellow, because the light from the sun has passed a long distance through air and the blue light (2)_____ scattered away. If the air is polluted with small particles, natural (3)_____ otherwise, the sunset will be more red. Sunsets over the sea may also be orange, (4)_____ salt particles in the air. The sky (5)_____ the sun is seen reddened, as well as the light coming directly from the sun.

SubQuestion No : 22

Q.22 Select the most appropriate option to fill in blank no. 2.

- Ans 1. has
 2. was
 3. will be
 4. has been

Question ID : 65497828436

Status : Answered

Chosen Option : 4

Comprehension:

In the following passage, some words have been deleted. Read the passage carefully and select the most appropriate option to fill in each blank.

When the air is clear, the sunset (1)_____ yellow, because the light from the sun has passed a long distance through air and the blue light (2)_____ scattered away. If the air is polluted with small particles, natural (3)_____ otherwise, the sunset will be more red. Sunsets over the sea may also be orange, (4)_____ salt particles in the air. The sky (5)_____ the sun is seen reddened, as well as the light coming directly from the sun.

SubQuestion No : 23

Q.23 Select the most appropriate option to fill in blank no. 3.

- Ans 1. if
 2. but
 3. or
 4. and

Question ID : 65497828437

Status : Answered

Chosen Option : 3

Comprehension:

In the following passage, some words have been deleted. Read the passage carefully and select the most appropriate option to fill in each blank.

When the air is clear, the sunset (1)_____ yellow, because the light from the sun has passed a long distance through air and the blue light (2)_____ scattered away. If the air is polluted with small particles, natural (3)_____ otherwise, the sunset will be more red. Sunsets over the sea may also be orange, (4)_____ salt particles in the air. The sky (5)_____ the sun is seen reddened, as well as the light coming directly from the sun.

SubQuestion No : 24

Q.24 Select the most appropriate option to fill in blank no. 4.

- Ans 1. for
 2. due to
 3. because
 4. as

Question ID : 65497828438

Status : Answered

Chosen Option : 2

Comprehension:

In the following passage, some words have been deleted. Read the passage carefully and select the most appropriate option to fill in each blank.

When the air is clear, the sunset (1)_____ yellow, because the light from the sun has passed a long distance through air and the blue light (2)_____ scattered away. If the air is polluted with small particles, natural (3)_____ otherwise, the sunset will be more red. Sunsets over the sea may also be orange, (4)_____ salt particles in the air. The sky (5)_____ the sun is seen reddened, as well as the light coming directly from the sun.

SubQuestion No : 25

Q.25 Select the most appropriate option to fill in blank no. 5.

- Ans 1. across
 2. through
 3. along
 4. around

Question ID : 65497828439

Status : Answered

Chosen Option : 3

Q.1 रिक्त स्थान भरने के लिए सबसे उपयुक्त शब्द का चयन करें।

तीनों _____ के स्वामी हैं इसलिए त्रिलोकीनाथ कहलाते हैं।

- Ans
- 1. धरती
 - 2. भवनो
 - 3. भुवनो
 - 4. आकाशो

Question ID : 65497828446
Status : Not Answered
Chosen Option : --

Q.2 इस प्रश्न में, एक शब्द चार अलग-अलग प्रकार से लिखा गया है, जिसमें से केवल एक को सही ढग से लिखा गया है। सही वर्तनी वाले शब्द का चयन करें।

- Ans
- 1. अनाधिकार
 - 2. अनाधीकार
 - 3. अनधिकार
 - 4. अनधीकार

Question ID : 65497828444
Status : Not Answered
Chosen Option : --

Q.3 दिए गए वाक्य में रेखांकित खड को प्रतिस्थापित करने के लिए सबसे उपयुक्त विकल्प का चयन करें। यदि इसे प्रतिस्थापित करने की आवश्यकता नहीं है, तो विकल्प 'किसी बदलाव की आवश्यकता नहीं है' का चयन करें।

मेरी गाय को छूने का उत्साह कभी कोई नहीं कर सकता क्योंकि वह मारती है।

- Ans
- 1. मेरी गाय को छूने की मेहनत
 - 2. मेरी गाय को छूने का हिम्मत
 - 3. किसी बदलाव की आवश्यकता नहीं है।
 - 4. मेरी गाय को छूने का साहस

Question ID : 65497828447
Status : Not Answered
Chosen Option : --

Q.4 दिए गए शब्द का विलोम चुनें।

द्रुत

- Ans
- 1. मथर
 - 2. अद्वैत
 - 3. जड़
 - 4. वेग

Question ID : 65497828448
Status : Not Answered
Chosen Option : --

Q.5 दिए गए वाक्य में रेखांकित शब्द को प्रतिस्थापित करने के लिए सबसे उपयुक्त विकल्प का चयन करें। यदि इसे प्रतिस्थापित करने की आवश्यकता नहीं है, तो विकल्प 'किसी बदलाव की आवश्यकता नहीं है' का चयन करें।

पिताजी मेरे लिए कुछ कपड़े ले आये।

- Ans
- 1. मेरे को
 - 2. मुझे
 - 3. किसी बदलाव की आवश्यकता नहीं है।
 - 4. मेरे के लिए

Question ID : 65497828450
Status : Not Answered
Chosen Option : --

Q.6 दिए गए शब्द के समानार्थी शब्द का चयन करें।

कमल

- Ans
- 1. अमिय
 - 2. अमृत
 - 3. अरविन्द
 - 4. आयतन

Question ID : 65497828452
Status : Not Answered
Chosen Option : --

Q.7 मुझे मज़ा आती है। - रेखांकित शब्द की वृत्ति बताइए-

- Ans
- 1. लिंग के कारण
 - 2. वचन के कारण
 - 3. विशेषण के कारण
 - 4. कारक के कारण

Question ID : 65497828456
Status : Not Answered
Chosen Option : --

Q.8 इस प्रश्न में, एक शब्द चार अलग-अलग प्रकार से लिखा गया है, जिसमें से केवल एक को सही ढंग से लिखा गया है। सही वर्तनी वाले शब्द का चयन करें।

- Ans
- 1. मातर्हीन
 - 2. मातृहीन
 - 3. मार्तहीन
 - 4. मातृहिन

Question ID : 65497828445
Status : Not Answered
Chosen Option : --

Q.9 रिक्त स्थान को भरने के लिए सबसे उपयुक्त विकल्प का चयन करें।

मेरी _____ है कि मुझे चार दिन की छुट्टी दी जाए।

- Ans
- 1. प्रार्थना
 - 2. याचना
 - 3. पूजा
 - 4. आराधना

Question ID : 65497828459
Status : Not Answered
Chosen Option : --

Q.10 'वह बात जो जन साधारण में चलती आ रही है' इस वाक्यांश के लिए एक सार्थक शब्द दीजिए।

- Ans
- 1. कूपमडूक
 - 2. किवदती
 - 3. किकर्तव्य
 - 4. कपोल-कल्पित

Question ID : 65497828440
Status : Not Answered
Chosen Option : --

Q.11 दिए गए शब्द के समानार्थी शब्द का चयन करें।

यमुना

- Ans
- 1. अर्कजा
 - 2. तड़ाग
 - 3. आपगा
 - 4. निम्नगा

Question ID : 65497828443
Status : Not Answered
Chosen Option : --

Q.12 'सामान्य नियम के विरुद्ध बात' वाक्यांश के लिए एक शब्द होगा-

- Ans
- 1. विवाद
 - 2. सवाद
 - 3. वाद
 - 4. अपवाद

Question ID : 65497828455
Status : Not Answered
Chosen Option : --

Q.13 'आँख लगाना' मुहावरे का सही अर्थ है-

- Ans
- 1. गहरी नींद आना
 - 2. आँख में दर्द होना
 - 3. गले पड़ना
 - 4. झपकी आना

Question ID : 65497828454
Status : Not Answered
Chosen Option : --

Q.14 निम्नलिखित प्रश्न में, दिए गए चार विकल्पों में से, उस विकल्प का चयन करें, जो मुहावरे का अर्थ व्यक्त करता है।

कथा के बैंगन

- Ans
- 1. मन गढ़त बातें
 - 2. कृपण व्यक्ति
 - 3. असभव वस्तु
 - 4. केवल दूसरों के लिए उपदेश

Question ID : 65497828449

Status : Not Answered

Chosen Option : --

Q.15 'गुणदोष का समरूप मूल्यांकन करने वाले' के लिए एक शब्द लिखिए-

- Ans
- 1. शास्त्रज्ञ
 - 2. ज्योतिषी
 - 3. जिज्ञासु
 - 4. समीक्षक

Question ID : 65497828458

Status : Not Answered

Chosen Option : --

Q.16 दिए गए वाक्य में रेखांकित खंड को प्रतिस्थापित करने के लिए सबसे उपयुक्त विकल्प का चयन करें। यदि इसे प्रतिस्थापित करने की आवश्यकता नहीं है, तो विकल्प 'किसी बदलाव की आवश्यकता नहीं है' का चयन करें।

मैं आपका दर्शन करने आया हूँ।

- Ans
- 1. किसी बदलाव की आवश्यकता नहीं है।
 - 2. मैं आपकी
 - 3. मैं आपके
 - 4. मैं आपसे

Question ID : 65497828453

Status : Not Answered

Chosen Option : --

Q.17 दिए गए वाक्य का वह भाग ज्ञात करें जिसमें कोई त्रुटि है। यदि कोई त्रुटि नहीं है, तो 'कोई त्रुटि नहीं है' विकल्प को चुनें।

स्टेशन पहुँचते ही वह फोन कर दिया।

- Ans
- 1. फोन कर दिया
 - 2. कोई त्रुटि नहीं है
 - 3. स्टेशन पहुँचते ही
 - 4. वह

Question ID : 65497828442

Status : Not Answered

Chosen Option : --

Q.18 दिए गए वाक्य का वह भाग ज्ञात करें जिसमें कोई त्रुटि है। यदि कोई त्रुटि नहीं है, तो 'कोई त्रुटि नहीं है' चुनें।

प्रधानाचार्य ने (1)/ हिंदी अध्यापक (2)/ को बुलाये। (3)/ कोई त्रुटि नहीं है(4)

Ans 1. 3

2. 4

3. 2

4. 1

Question ID : 65497828451

Status : Not Answered

Chosen Option : --

Q.19 रिक्त स्थान भरने के लिए सबसे उपयुक्त शब्द का चयन करें।

_____ से गहने बनते हैं।

Ans 1. टीन

2. सोने

3. लोहे

4. सोना

Question ID : 65497828441

Status : Not Answered

Chosen Option : --

Q.20 सद्भाव - रेखांकित शब्द का सही विलोम बताइए-

Ans 1. दुर्भाव

2. गुस्सा

3. स्वभाव

4. क्षम्य

Question ID : 65497828457

Status : Not Answered

Chosen Option : --

Comprehension:

गद्यांश को पढ़कर पूछे गये प्रश्नों के उत्तर लिखिए-

एक साधु थे। भिक्षाटन से मजे से दिन गुजारते और आनंदपूर्वक भजन करते थे। एक दिन महत्वाकांक्षा सिर पर चढ़ी, झोपड़ी के चूहों से निपटने के लिए एक बिल्ली पाली। बिल्ली के लिए दूध की जरूरत पड़ी - तो गाय खरीद कर लाए। गाय को साज-सभाल के लिए महिला की आवश्यकता पड़ी। महिला से शादी कर ली। परिवार बना। सत बनकर लोक कल्याण करने का लक्ष्य कहीं से कहीं चला गया। भौतिक आकांक्षाओं का जाल-जंजाल इतना बढ़ गया कि परमार्थ का लक्ष्य पूरा करने के लिए कुछ भी नहीं बचता था। सारी क्षमता उसी में खत्म जाती थी। सपनों का जमघट ही शेष रह जाता है। कहने का तात्पर्य यह है कि हमें हमारे लक्ष्य की ओर ध्यान देना चाहिए।

SubQuestion No : 21

Q.21 साधु अपना निर्वाह _____ करके करता था। रिक्त स्थान की पूर्ति कीजिए।

Ans 1. भिक्षाटन करके

2. बच्चों को पढ़ाकर

3. नौकरी करके

4. खेती करके

Question ID : 65497828461

Status : Not Answered

Chosen Option : --

Comprehension:

गद्यांश को पढ़कर पूछे गये प्रश्नों के उत्तर लिखिए-

एक साधु थे। भिक्षाटन से मजे से दिन गुजारते और आनंदपूर्वक भजन करते थे। एक दिन महत्वाकांक्षा सिर पर चढ़ी, झोपड़ी के चूहों से निपटने के लिए एक बिल्ली पाली। बिल्ली के लिए दूध की जरूरत पड़ी - तो गाय खरीद कर लाए। गाय को साज-सभाल के लिए महिला की आवश्यकता पड़ी। महिला से शादी कर ली। परिवार बना। सत बनकर लोक कल्याण करने का लक्ष्य कहीं से कहीं चला गया। भौतिक आकांक्षाओं का जाल-जंजाल इतना बढ़ गया कि परमार्थ का लक्ष्य पूरा करने के लिए कुछ भी नहीं बचता था। सारी क्षमता उसी में खत्म जाती थी। सपनों का जमघट ही शेष रह जाता है। कहने का तात्पर्य यह है कि हमें हमारे लक्ष्य की ओर ध्यान देना चाहिए।

SubQuestion No : 22

Q.22 'आवश्यकता' के स्थान पर उचित शब्द लिखिए।

- Ans
- 1. अत्रलमद
 - 2. जरूरत
 - 3. परिश्रम
 - 4. अवश्य

Question ID : 65497828462

Status : Not Answered

Chosen Option : --

Comprehension:

गद्यांश को पढ़कर पूछे गये प्रश्नों के उत्तर लिखिए-

एक साधु थे। भिक्षाटन से मजे से दिन गुजारते और आनंदपूर्वक भजन करते थे। एक दिन महत्वाकांक्षा सिर पर चढ़ी, झोपड़ी के चूहों से निपटने के लिए एक बिल्ली पाली। बिल्ली के लिए दूध की जरूरत पड़ी - तो गाय खरीद कर लाए। गाय को साज-सभाल के लिए महिला की आवश्यकता पड़ी। महिला से शादी कर ली। परिवार बना। सत बनकर लोक कल्याण करने का लक्ष्य कहीं से कहीं चला गया। भौतिक आकांक्षाओं का जाल-जंजाल इतना बढ़ गया कि परमार्थ का लक्ष्य पूरा करने के लिए कुछ भी नहीं बचता था। सारी क्षमता उसी में खत्म जाती थी। सपनों का जमघट ही शेष रह जाता है। कहने का तात्पर्य यह है कि हमें हमारे लक्ष्य की ओर ध्यान देना चाहिए।

SubQuestion No : 23

Q.23 महत्वाकांक्षा रेखांकित शब्द का उचित अर्थ लिखिए।

- Ans
- 1. दयालु
 - 2. लायक न होना
 - 3. उन्नति को प्राप्त करने की इच्छा
 - 4. बलवान होना

Question ID : 65497828463

Status : Not Answered

Chosen Option : --

Comprehension:

गद्यांश को पढ़कर पूछे गये प्रश्नों के उत्तर लिखिए-

एक साधु थे। भिक्षाटन से मजे से दिन गुजारते और आनंदपूर्वक भजन करते थे। एक दिन महत्वाकांक्षा सिर पर चढ़ी, झोपड़ी के चूहों से निपटने के लिए एक बिल्ली पाली। बिल्ली के लिए दूध की जरूरत पड़ी - तो गाय खरीद कर लाए। गाय को साज-सभाल के लिए महिला की आवश्यकता पड़ी। महिला से शादी कर ली। परिवार बना। सत बनकर लोक कल्याण करने का लक्ष्य कहीं से कहीं चला गया। भौतिक आकांक्षाओं का जाल-जंजाल इतना बढ़ गया कि परमार्थ का लक्ष्य पूरा करने के लिए कुछ भी नहीं बचता था। सारी क्षमता उसी में खत्म जाती थी। सपनों का जमघट ही शेष रह जाता है। कहने का तात्पर्य यह है कि हमें हमारे लक्ष्य की ओर ध्यान देना चाहिए।

SubQuestion No : 24

Q.24 परमार्थ- रेखांकित शब्द का विलोम बताइए।

- Ans
- 1. दुष्ट
 - 2. स्वार्थ
 - 3. क्रोधी
 - 4. लालची

Question ID : 65497828464

Status : Not Answered

Chosen Option : --

Comprehension:

गद्यांश को पढ़कर पूछे गये प्रश्नों के उत्तर लिखिए-

एक साधु थे। भिक्षाटन से मजे से दिन गुजारते और आनंदपूर्वक भजन करते थे। एक दिन महत्वाकांक्षा सिर पर चढ़ी, झोपड़ी के चूहों से निपटने के लिए एक बिल्ली पाली। बिल्ली के लिए दूध की जरूरत पड़ी - तो गाय खरीद कर लाए। गाय को साज-सभाल के लिए महिला की आवश्यकता पड़ी। महिला से शादी कर ली। परिवार बना। सत बनकर लोक कल्याण करने का लक्ष्य कहीं से कहीं चला गया। भौतिक आकांक्षाओं का जाल-जंजाल इतना बढ़ गया कि परमार्थ का लक्ष्य पूरा करने के लिए कुछ भी नहीं बचता था। सारी क्षमता उसी में खत्म जाती थी। सपनों का जमघट ही शेष रह जाता है। कहने का तात्पर्य यह है कि हमें हमारे लक्ष्य की ओर ध्यान देना चाहिए।

SubQuestion No : 25

Q.25 झोपड़ी के चूहों से निपटने के लिए साधु ने क्या किया?

Ans 1. बिल्ली पाली

2. दवा डालकर चूहों को मार दिया।

3. कुत्ते को पाला

4. कुछ भी नहीं किया

Question ID : 65497828465

Status : Not Answered

Chosen Option : --

**SSC
GD**

Previous Year Paper
16 Nov 2021 Shift 2

Exam Date	16/11/2021
Exam Time :	12:30 PM - 2:00 PM
Subject	Constable GD 2021

Section : Part A General Intelligence and Reasoning

Q.1 Four letter-clusters have been given, out of which three are alike in some manner and one is different. Select the letter-cluster that is different.

- Ans
- 1. FDB
 - 2. OMK
 - 3. JHF
 - 4. USP

Question ID : 65497829500
Status : Answered
Chosen Option : 4

Q.2 In a certain code language, 'MANGO' is written as 'QERKS' and 'APPLE' is written as 'ETTPI'. How will 'GUAVA' be written in that language?

- Ans
- 1. KYFXF
 - 2. KYGZE
 - 3. KYEZE
 - 4. KXEZE

Question ID : 65497829482
Status : Answered
Chosen Option : 3

Q.3 In a certain code language, GAME is written as TUZANOVW, and CAR is written as XYZAIJ. How will POST be written in that language?

- Ans
- 1. OQNPRTSV
 - 2. QRPQTUUV
 - 3. KLLMHIGH
 - 4. KLMNJKGH

Question ID : 65497829505
Status : Answered
Chosen Option : 3

Q.4 Select the option that is related to the third number in the same way as the second number is related to the first number.

20 : 480 :: 25 : ?

Ans 1. 700

2. 725

3. 655

4. 625

Question ID : 65497829488

Status : Answered

Chosen Option : 2

Q.5 Select the option that is related to the third term in the same way as the second term is related to the first term.

ZYGOTE : ZYTOGE :: SEQUENCE : ?

Ans 1. USQNEEEC

2. USQENCEE

3. SUQNEEEC

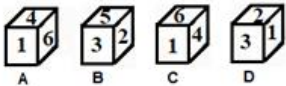
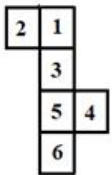
4. USNQEEEC

Question ID : 65497829504

Status : Marked For Review

Chosen Option : 2

Q.6 Select the dice that can be formed by folding the given sheet along the lines.



Ans 1. Only B and D

2. Only B, C and D

3. Only B

4. Only A and C

Question ID : 65497829490

Status : Answered

Chosen Option : 2

Q.7 Aditi is the daughter of Sanket. Vritti is the daughter of Ankit. Kriti is the mother of Mahi. Neeta is Sanket's wife. Neeta is the mother-in-law of Vritti's mother Kriti. Which of the following statements is NOT correct?

- Ans
- 1. Ankit is the father of Mahi.
 - 2. Vritti is the sister of Mahi.
 - 3. Aditi is the daughter of Neeta.
 - 4. Kriti is the daughter of Sanket.

Question ID : 65497829506

Status : Answered

Chosen Option : 4

Q.8 If 'A' denotes 'addition', 'B' denotes 'multiplication', 'C' denotes 'subtraction', and 'D' denotes 'division', then what will be the value of the following expression?

100 D (1 B 4) A 2 B (13 A 11) C 3 B (17 C 12)

- Ans
- 1. 52
 - 2. 58
 - 3. 49
 - 4. 60

Question ID : 65497829489

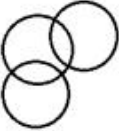
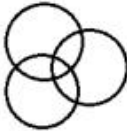

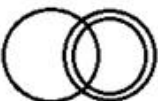
Status : Answered

Chosen Option : 2

Q.9 Select the Venn diagram that best represents the relationship between the following classes.

School, Teacher, Employee

Ans

- 1. 
- 2. 
- 3. 
- 4. 

Question ID : 65497829499

Status : Answered

Chosen Option : 1

Q.10 Select the number from among the given options that can replace the question mark (?) in the following series.

5, 9, 18, 34, ?, 95

- Ans
- 1. 65
 - 2. 69
 - 3. 63
 - 4. 59

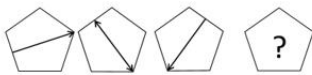
Question ID : 65497829502
Status : Answered
Chosen Option : 4

Q.11 Four number triads have been given, out of which three are alike in some manner and one is different. Select the number triad that is different.

- Ans
- 1. (46, 65, 82)
 - 2. (54, 73, 90)
 - 3. (21, 40, 57)
 - 4. (39, 48, 75)

Question ID : 65497829484
Status : Answered
Chosen Option : 4

Q.12 Select the figure from among the given options that can replace the question mark (?) in the following series.



Ans

- 1.
- 2.
- 3.
- 4.

Question ID : 65497829495
Status : Answered
Chosen Option : 4

Q.13 Select the correct option that indicates the arrangement of the given words in the order in which they appear in an English dictionary.

1. Dermatitis
2. Desistance
3. Derogation
4. Descendant
5. Dereliction

- Ans
- 1. 5, 4, 1, 3, 2
 - 2. 5, 1, 3, 2, 4
 - 3. 5, 2, 1, 3, 4
 - 4. 5, 1, 3, 4, 2

Question ID : 65497829492

Status : Answered

Chosen Option : 4

Q.14 Select the combination of letters that when sequentially placed in the blanks of the given series will complete the series.

A _ _ B _ _ A B _ C A _ B B C

- Ans
- 1. B, C, A, A, A, B
 - 2. B, A, B, A, C, B
 - 3. A, B, C, A, B, A
 - 4. B, B, C, C, A, B

Question ID : 65497829493

Status : Answered

Chosen Option : 3

Q.15 O, P, Q, R, S, T and U are sitting in a row facing north. U is sitting to the immediate right of T. Q is sitting in between R and O. P, who is on the extreme right, is sitting to the immediate right of O. S is sitting to the immediate left of R. Who is sitting in the middle of the row?

- Ans
- 1. S
 - 2. R
 - 3. T
 - 4. Q

Question ID : 65497829498

Status : Answered

Chosen Option : 2

Q.16 Read the given statements and conclusions carefully. Assuming that the information given in the statements is true, even if it appears to be at variance with commonly known facts, decide which of the given conclusions logically follow(s) from the statements.

Statements:

Some cats are animals.
All animals are plants.

Conclusions:

I. All cats are plants.
II. Some plants are cats.
III. Some plants are animals.
IV. All animals are cats.

- Ans**
- 1. Only conclusion I follows
 - 2. All the conclusions follow
 - 3. Only conclusions I, II and III follow
 - 4. Only conclusions II and III follow

Question ID : 65497829483

Status : Answered

Chosen Option : 4

Q.17 Six friends are sitting in a straight line. E is 4th from the right. E is between B and D. A is adjacent to B. D is adjacent to C. D is between E and C. F is adjacent to C. Who is sitting between F and D?

- Ans**
- 1. A
 - 2. E
 - 3. C
 - 4. B

Question ID : 65497829487

Status : Answered

Chosen Option : 3

Q.18 Select the number from among the given options that can replace the question mark (?) in the following series.

153, 149, 143, 135, ?

- Ans**
- 1. 131
 - 2. 125
 - 3. 129
 - 4. 127

Question ID : 65497829494

Status : Answered

Chosen Option : 2

Q.19 If the diagonal of a square is increased by 4 cm, its area increases by 56 cm^2 . Find the ratio of the new area of the square to the initial area of the square.

- Ans**
- 1. 16 : 9
 - 2. 13 : 8
 - 3. 18 : 11
 - 4. 12 : 5

Question ID : 65497829485

Status : Not Answered

Chosen Option : --

Q.20 Select the letter-cluster from among the given options that can replace the question mark (?) in the following series.

IOM, NTR, SYW, ?

Ans ✓ 1. XDB

✗ 2. JPN

✗ 3. NSX

✗ 4. OTZ

Question ID : 65497829496

Status : Answered

Chosen Option : 1

Q.21 Select the correct mirror image of the given combination when the mirror is placed at 'PQ' as shown.

MERCHANT
P
|
Q

Ans ✓ 1. TИAHCЯEM

✗ 2. MEBCNAT

✗ 3. TИCЯHEM

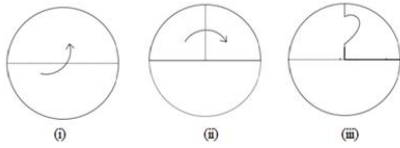
✗ 4. MEBCNAT

Question ID : 65497829503

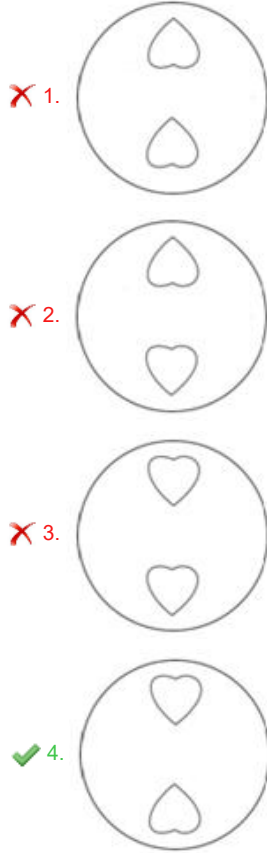
Status : Answered

Chosen Option : 1

Q.22 The sequence of folding a piece of paper and the manner in which the folded paper has been cut is shown in the following figures. How would this paper look when unfolded?



Ans



Question ID : 65497829486
 Status : Answered
 Chosen Option : 4

Q.23 In a certain code language, 'PHENYL' is coded as '9-11-17-8-5-13' and 'COLONY' is coded as '6-12-13-12-8-5'. How will 'COLONEL' be coded in that language?

- Ans
- 1. 6-12-12-13-8-17-13
 - 2. 6-12-13-12-8-17-13
 - 3. 6-12-12-13-8-11-13
 - 4. 6-17-12-13-8-13-11

Question ID : 65497829501
 Status : Answered
 Chosen Option : 2

Q.24 Select the option in which the given figure is embedded (rotation is NOT allowed).

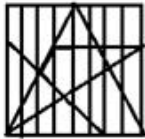


Ans

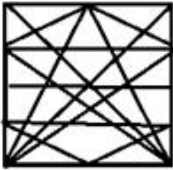
✗ 1.



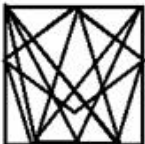
✓ 2.



✗ 3.



✗ 4.



Question ID : 65497829491
Status : Answered
Chosen Option : 3

Q.25 'Experimenter' is related to 'Lab' in the same way as 'Chef' is related to '_____'.
Ans

✗ 1. Cooking

✗ 2. Food

✗ 3. Dishes

✓ 4. Kitchen

Question ID : 65497829497
Status : Answered
Chosen Option : 4

Section : Part B General Knowledge and General Awareness

Q.1 _____ launched the Fit India Mobile App at an event at Major Dhyan Chand National Stadium, New Delhi in August 2021.

Ans ✓ 1. Anurag Singh Thakur

✗ 2. Nisith Praman k

✗ 3. Ravi Mittal

✗ 4. Usha Sharma

Question ID : 65497829530
Status : Answered
Chosen Option : 1

Q.2 The acceleration of an object is said to be _____ when an object travels in a straight line and its velocity increases or decreases by equal amount in equal intervals of time.

- Ans
- 1. negative
 - 2. non-uniform
 - 3. uniform
 - 4. positive

Question ID : 65497829516
Status : Answered
Chosen Option : 3

Q.3 Who was appointed as the State Election Commissioner of Jammu and Kashmir on October 30, 2020?

- Ans
- 1. Kewal Kumar Sharma
 - 2. V Bhaskaran
 - 3. Shatrunjay Kumar Singh
 - 4. Manoj Kumar

Question ID : 65497829520
Status : Not Answered
Chosen Option : --

Q.4 Which of the following animals breathes through its skin?

- Ans
- 1. Frog
 - 2. Rabbit
 - 3. Peacock
 - 4. Deer

Question ID : 65497829514
Status : Answered
Chosen Option : 1

Q.5 Which of the following is the most reactive metal?

- Ans
- 1. Silver
 - 2. Aluminium
 - 3. Iron
 - 4. Potassium

Question ID : 65497829513
Status : Answered
Chosen Option : 4

Q.6 Which non-metal among the following is poly-atomic?

- Ans
- 1. Sulphur
 - 2. Argon
 - 3. Oxygen
 - 4. Helium

Question ID : 65497829525
Status : Answered
Chosen Option : 1

Q.7 Who among the following was appointed as the first Municipal Commissioner of Bombay in 1865?

- Ans
- 1. William Hunter
 - 2. Charles Atkinson
 - 3. H Fowler
 - 4. Arthur Crawford

Question ID : 65497829510
Status : Not Answered
Chosen Option : --

Q.8 'La Liga' title is associated with _____.

- Ans
- 1. tennis
 - 2. football
 - 3. cricket
 - 4. sprinting

Question ID : 65497829508
Status : Answered
Chosen Option : 2

Q.9 In which of the following states is the Boramdeo temple located, where each year in the last week of March 'Bhoramdeo Mahotsav' is celebrated?

- Ans
- 1. West Bengal
 - 2. Karnataka
 - 3. Tamil Nadu
 - 4. Chhattisgarh

Question ID : 65497829512
Status : Answered
Chosen Option : 1

Q.10 Who became the first Indian Air Force pilot to perform a wingsuit skydive jump? S/he achieved this feat in July 2019.

- Ans
- 1. Shital Mahajan Rane
 - 2. Archana Sardana
 - 3. Rachel Thomas
 - 4. Tarun Chaudhri

Question ID : 65497829518
Status : Not Answered
Chosen Option : --

Q.11 _____ was the son of a Chief of the Jnatrika (or Jhatrika) Kshatriya clan.

- Ans
- 1. Gautama Buddha
 - 2. Rishabhanath
 - 3. Vardhamana Mahavira
 - 4. Parshvanath

Question ID : 65497829527
Status : Not Answered
Chosen Option : --

Q.12 _____ was the residence of the Mughal emperors of India for nearly 200 years until 1857.

- Ans
- 1. Jehangir Mahal
 - 2. Red Fort
 - 3. Agra Fort
 - 4. Pari Mahal

Question ID : 65497829521
Status : Answered
Chosen Option : 3

Q.13 Which of the following states won the 'Best Tableau' award at the 71st Republic Day parade in January 2020?

- Ans
- 1. Assam
 - 2. Goa
 - 3. Odisha
 - 4. Uttar Pradesh

Question ID : 65497829523
Status : Answered
Chosen Option : 4

Q.14 The Uttar Pradesh cabinet approved a proposal to name a zoological garden at _____ after the freedom fighter and revolutionary Ashfaqullah Khan.

- Ans
- 1. Gorakhpur
 - 2. Faizabad
 - 3. Shahjahanpur
 - 4. Ghaziabad

Question ID : 65497829517
Status : Answered
Chosen Option : 1

Q.15 Which of the following statements about the Mahanadi river is INCORRECT?

- Ans
- 1. It rises in the highlands of Chhattisgarh.
 - 2. It drains into the Arabian Sea.
 - 3. A part of its river basin lies in Maharashtra.
 - 4. It is about 860 km long.

Question ID : 65497829522
Status : Answered
Chosen Option : 2

Q.16 Who is the author of the book 'Courts of India: Past to Present'?

- Ans
- 1. Shashi Tharoor
 - 2. Satyarth Nayak
 - 3. Jayanta Kalita
 - 4. Ranjan Gogoi

Question ID : 65497829515
Status : Answered
Chosen Option : 4

Q.17 The Government of India approved the Ayushman Bharat Pradhan Mantri Jan Arogya Yojana (AB-PM-JAY) in the year _____.

Ans 1. 2018

2. 2014

3. 2019

4. 2015

Question ID : 65497829531
Status : Answered
Chosen Option : 3

Q.18 The money value of all the final goods and services produced within the country during a particular year is called _____.

Ans 1. per capita income

2. net Domestic Product

3. national Income

4. gross Domestic Product

Question ID : 65497829511
Status : Answered
Chosen Option : 4

Q.19 Which of the following options gives the correct chronological order of rulers of the Mauryan Empire?

Ans 1. Brihadratha - Chandragupta - Bindusara - Ashoka

2. Ashoka - Brihadratha - Chandragupta - Bindusara

3. Chandragupta - Bindusara - Ashoka - Brihadratha

4. Bindusara - Chandragupta - Ashoka - Brihadratha

Question ID : 65497829528
Status : Answered
Chosen Option : 3

Q.20 Which of the following is NOT a fundamental right under the 44th Amendment Act, 1978 of Indian Constitution?

Ans 1. Right to property

2. Right to equality

3. Right against exploitation

4. Right to religion

Question ID : 65497829519
Status : Answered
Chosen Option : 1

Q.21 Which of the following countries hosted the 13th edition of the 2020 ICC Under 19 Cricket World Cup?

Ans 1. England

2. South Africa

3. Australia

4. India

Question ID : 65497829526
Status : Answered
Chosen Option : 2

Q.22 In which state is the Hogenakkal Falls located?

- Ans 1. Andhra Pradesh
 2. Kerala
 3. Maharashtra
 4. Tamil Nadu

Question ID : 65497829507
Status : Not Answered
Chosen Option : --

Q.23 The Life Insurance Corporation of India Act was passed by the Parliament in the year _____.

- Ans 1. 1956
 2. 1948
 3. 1971
 4. 1965

Question ID : 65497829529
Status : Not Answered
Chosen Option : --

Q.24 Which of the following is a biometric enabled digital service for pensioners launched by the Government of India?

- Ans 1. Pradhan Mantri Jeevan Jyoti Beema Yojna
 2. Pradhan Mantri Mudra Yojna
 3. Pradhan Mantri Jan Dhan Yojna
 4. Jeevan Pramaan

Question ID : 65497829509
Status : Answered
Chosen Option : 4

Q.25 Tvesa Malik is an Indian _____ player.

- Ans 1. volleyball
 2. golf
 3. chess
 4. basketball

Question ID : 65497829524
Status : Not Answered
Chosen Option : --

Q.1 The value of $42 \div 9$ of $6 - [64 \div 48 \times 3 - 15 \div 8 \times (11 - 17) \div 9] \div 14$ is:

- Ans
- 1. $\frac{19}{36}$
 - 2. $\frac{7}{18}$
 - 3. $\frac{29}{72}$
 - 4. $\frac{5}{12}$

Question ID : 65497829551
Status : Not Answered
Chosen Option : --

Q.2 A can do $\frac{2}{5}$ of a work in 6 days and B can do 30% of the same work in 3 days. They worked together for 4 days. The remaining work was completed by C alone in 6 days. B and C together can complete 70% of the original work in:

- Ans
- 1. $5\frac{1}{2}$ days
 - 2. 4 days
 - 3. 5 days
 - 4. $4\frac{1}{2}$ days

Question ID : 65497829553
Status : Answered
Chosen Option : 4

Q.3 The amount of a certain sum in 3 years at simple interest at $x\%$ p.a. is ₹5,472 and the amount of the same sum in $7\frac{1}{2}$ years at the same rate, at simple interest is ₹6,930. The value of x is:

- Ans
- 1. 7.2
 - 2. 8.5
 - 3. 8
 - 4. 6.5

Question ID : 65497829555
Status : Not Answered
Chosen Option : --

Q.4 There are two sections A and B of a class, consisting of 38 and 42 students, respectively. If the average weight of the students of section A is 55 kg and that of section B is 32 kg, find the average weight of all the students in the class.

- Ans
- 1. 42 kg
 - 2. 42.925 kg
 - 3. 44.925 kg
 - 4. 40.925 kg

Question ID : 65497829537
Status : Answered
Chosen Option : 2

Q.5 A dealer sold an article at a loss of 4%. Had he sold it for ₹120 more, he would have gained 8%. To gain 11%, he should sell the article for?

- Ans**
- 1. ₹1,110
 - 2. ₹1,200
 - 3. ₹1,320
 - 4. ₹1,210

Question ID : 65497829549
Status : Answered
Chosen Option : 1

Q.6 A sum fetched a simple interest of ₹3,040 at the rate of 8 % p.a. in 5 years. What is the sum?

- Ans**
- 1. ₹8,600
 - 2. ₹7,600
 - 3. ₹7,700
 - 4. ₹6,600

Question ID : 65497829539
Status : Answered
Chosen Option : 2

Q.7 The greatest number that on dividing 2675 and 2320 leaves the remainders 5 and 6, respectively, is:

- Ans**
- 1. 168
 - 2. 170
 - 3. 187
 - 4. 178

Question ID : 65497829536
Status : Answered
Chosen Option : 4

Q.8 Speed of an aircraft is 120 km/min. This speed in m/sec is:

- Ans**
- 1. 120000
 - 2. 12000
 - 3. 1200
 - 4. 2000

Question ID : 65497829543
Status : Answered
Chosen Option : 4

Q.9 A and B can complete a piece of work in 120 days, B and C can complete it in 150 days, and A and C can complete it in 200 days. In how many days can B alone complete two-fifths of the same work?

- Ans**
- 1. 200
 - 2. 100
 - 3. 80
 - 4. 175

Question ID : 65497829547
Status : Answered
Chosen Option : 3

Q.10 If the sides of a triangle measure 21 cm, 35 cm and 28 cm, what is the measure of its in radius? (in cm)

- Ans**
- 1. 8 cm
 - 2. 7 cm
 - 3. 21 cm
 - 4. 9 cm

Question ID : 65497829541
Status : Not Answered
Chosen Option : --

Q.11 After giving a discount of 20% on the marked price of an article, it is sold for ₹120. Had the discount not been given, the profit would have been 20%. What is the cost price of the article?

- Ans**
- 1. ₹120
 - 2. ₹130
 - 3. ₹100
 - 4. ₹125

Question ID : 65497829550
Status : Answered
Chosen Option : 4

Q.12 A discount of 20% on the price of an article is the same as a discount of 25% on the price of another article. The prices of the two articles will be, respectively:

- Ans**
- 1. ₹40 and ₹50
 - 2. ₹60 and ₹50
 - 3. ₹50 and ₹40
 - 4. ₹50 and ₹60

Question ID : 65497829545
Status : Answered
Chosen Option : 3

Q.13 The sides of a triangular park are 96 m, 110 m and 146 m. Its area is equal to the area of a field in the shape of a rhombus, one of whose diagonals is 60 m. The length (in m) of its other diagonal is:

- Ans 1. 176
 2. 132
 3. 218
 4. 88

Question ID : 65497829556
Status : Not Answered
Chosen Option : --

Q.14 What is the third proportional to 9 and 36?

- Ans 1. 72
 2. 288
 3. 144
 4. 122

Question ID : 65497829540
Status : Answered
Chosen Option : 3

Q.15 Solve the following:

$$523 + 523 \times 523 \div 523$$

- Ans 1. 1005
 2. 1235
 3. 1542
 4. 1046

Question ID : 65497829542
Status : Answered
Chosen Option : 4

Q.16 A shopkeeper has some toys. He sells two-third of the toys at a profit of 35% and the remaining toys at 10% loss. What is his overall percentage of profit?

- Ans 1. 16%
 2. 20%
 3. 18%
 4. 25%

Question ID : 65497829552
Status : Answered
Chosen Option : 2

Q.17 Two trains start from places A and B, respectively, and travel towards each other at the speeds of 60 km/h and 50 km/h, respectively. By the time they meet, the faster train has travelled 110 km more than the slower train. What is the distance between A and B?

- Ans**
- 1. 1100 km
 - 2. 1200 km
 - 3. 1150 km
 - 4. 1210 km

Question ID : 65497829548
Status : Answered
Chosen Option : 4

Q.18 The ratio of two numbers is 9 : 5. If 8 is added to the larger number and 4 is subtracted from the smaller number, the greater number becomes twice the smaller number. The larger number is:

- Ans**
- 1. 110
 - 2. 104
 - 3. 144
 - 4. 114

Question ID : 65497829538
Status : Answered
Chosen Option : 3

Q.19 Vignesh spends 42% of his monthly salary on food, 16% on house rent, 11% on entertainment and 7% on conveyance. But due to some family function, he has to borrow ₹12,000 from a money lender to meet the expenses of ₹18,000. What is his monthly salary?

- Ans**
- 1. ₹20,000
 - 2. ₹24,000
 - 3. ₹30,000
 - 4. ₹25,000

Question ID : 65497829535
Status : Answered
Chosen Option : 4

Q.20 The average of 4, 6, 8, 12 and x is 7 and the average of x , 9, 13, 15 and y is 9. What is the value of $2x - 3y$?

- Ans**
- 1. 5
 - 2. 3
 - 3. 19
 - 4. 1

Question ID : 65497829544
Status : Answered
Chosen Option : 4

Q.21 If the compound interest on a certain sum of money for two years at 9% p.a. is ₹3,762, then the sum is:

- Ans**
- 1. ₹20,000
 - 2. ₹18,000
 - 3. ₹25,000
 - 4. ₹24,000

Question ID : 65497829533
Status : Answered
Chosen Option : 1

Q.22 The ratio of the ages of A, B and C, 5 years ago, was 4 : 5 : 7. The sum of their present ages is 135 years. What will be the sum of the ages (in years) of B and C, 3 years from now?

- Ans**
- 1. 100
 - 2. 96
 - 3. 106
 - 4. 112

Question ID : 65497829554
Status : Answered
Chosen Option : 2

Q.23 Three numbers are in the ratio 4 : 9 : 13 and their LCM is 2340. Their HCF is:

- Ans**
- 1. 7
 - 2. 3
 - 3. 4
 - 4. 5

Question ID : 65497829534
Status : Answered
Chosen Option : 4

Q.24 A man sells two articles at ₹9,180 each. He gains 8% on one article and loses 15% on the other. His overall profit or loss is:

- Ans**
- 1. Profit ₹840
 - 2. Loss ₹840
 - 3. Loss ₹940
 - 4. Profit ₹940

Question ID : 65497829532
Status : Not Answered
Chosen Option : --

Q.25 The price of a car increased by 5% while its sales decreased by 16%. What is the percentage change in the total revenue?

- Ans**
- 1. 5% decrease
 - 2. 9% increase
 - 3. 9% decrease
 - 4. 5% increase

Question ID : 65497829546
Status : Not Answered

Q.1 Select the most appropriate meaning of the given idiom.

To be on the same page

- Ans** 1. To be published together
 2. To read a book together
 3. To understand what the other says
 4. To agree on something

Question ID : 65497829571
Status : Answered
Chosen Option : 3

Q.2 Select the option that can be used as a one-word substitute for the given group of words.

One who collects coins

- Ans** 1. Fatalist
 2. Philatelist
 3. Numismatist
 4. Anthropologist

Question ID : 65497829567
Status : Answered
Chosen Option : 3

Q.3 Select the most appropriate ANTONYM of the given word.

Spellbound

- Ans** 1. Amazed
 2. Captivated
 3. Enthralled
 4. Disenchanted

Question ID : 65497829569
Status : Answered
Chosen Option : 4

Q.4 The following sentence has been split into four segments. Identify the segment that contains a grammatical error.

We'll look at / your pet / when you go / on a vacation.

- Ans** 1. We'll look at
 2. on a vacation
 3. when you go
 4. your pet

Question ID : 65497829574
Status : Answered
Chosen Option : 1

Q.5 Select the most appropriate option that can substitute the underlined word in the given sentence.

Besides generating revenue, tourism brings a break from the ceremony of daily life.

- Ans
- 1. scrutiny
 - 2. symphony
 - 3. monotony
 - 4. company

Question ID : 65497829559
Status : Answered
Chosen Option : 3

Q.6 Select the correctly spelt word.

- Ans
- 1. Asassination
 - 2. Bureaucracy
 - 3. Philianthropist
 - 4. Peadeatrician

Question ID : 65497829568
Status : Answered
Chosen Option : 2

Q.7 Select the most appropriate meaning of the given idiom.

Tickled pink

- Ans
- 1. Fond of pink
 - 2. Very sensitive
 - 3. Very pleased
 - 4. Easily teased

Question ID : 65497829560
Status : Answered
Chosen Option : 3

Q.8 Select the most appropriate option to fill in the blank.

My sister bought the _____ watch.

- Ans
- 1. antipathy
 - 2. colloquial
 - 3. antilocal
 - 4. antique

Question ID : 65497829570
Status : Answered
Chosen Option : 4

Q.9 Select the most appropriate **SYNONYM** of the given word.

Ample

- Ans** 1. Sparse
 2. Sufficient
 3. Limited
 4. Scarce

Question ID : 65497829575
Status : Answered
Chosen Option : 2

Q.10 Select the option that can be used as a one-word substitute for the given group of words.

Many fish swimming together

- Ans** 1. Shoal
 2. Bevy
 3. Brood
 4. Flock

Question ID : 65497829561
Status : Answered
Chosen Option : 3

Q.11 Select the option that can be used as a one-word substitute for the given group of words.

A person who supervises during an examination

- Ans** 1. Invigilator
 2. Examinee
 3. Principal
 4. Administrator

Question ID : 65497829576
Status : Answered
Chosen Option : 1

Q.12 The following sentence has been split into four segments. Identify the segment that contains a grammatical error.

The most important / of all my goals / are to/ learn English.

- Ans** 1. of all my goals
 2. The most important
 3. are to
 4. learn English

Question ID : 65497829557
Status : Answered
Chosen Option : 3

Q.13 Select the most appropriate option that can substitute the underlined segment in the given sentence. If there is no need to substitute it, select 'No substitution required'.

The condition of the house had been so deteriorated from lack of maintenance that nobody wanted to purchase it.

- Ans
- 1. No substitution required
 - 2. was deteriorating
 - 3. was so deteriorated
 - 4. had so deteriorated

Question ID : 65497829572
Status : Answered
Chosen Option : 3

Q.14 Select the most appropriate synonym of the given word.

Submissive

- Ans
- 1. Adamant
 - 2. Obdurate
 - 3. Obedient
 - 4. Obstinate

Question ID : 65497829558
Status : Answered
Chosen Option : 4

Q.15 Select the option that will improve the underlined part of the given sentence. In case no improvement is needed, select 'No improvement required'.

The new President has bring in many reforms.

- Ans
- 1. No improvement required
 - 2. brought about
 - 3. bring up
 - 4. brought out

Question ID : 65497829573
Status : Not Answered
Chosen Option : --

Q.16 Select the most appropriate ANTONYM of the given word.

Fictitious

- Ans
- 1. False
 - 2. Factual
 - 3. Imaginative
 - 4. Subjective

Question ID : 65497829566
Status : Answered
Chosen Option : 2

Q.17 Select the most appropriate option to fill in the blank.

She _____ why I had not sent her an invitation.

- Ans
- 1. granted
 - 2. enquired
 - 3. desired
 - 4. denied

Question ID : 65497829564
Status : Answered
Chosen Option : 2

Q.18 Select the most appropriate option to fill in the blank.

The government should take steps to _____ pollution.

- Ans
- 1. control
 - 2. convey
 - 3. conduct
 - 4. consume

Question ID : 65497829562
Status : Answered
Chosen Option : 1

Q.19 Select the INCORRECTLY spelt word.

- Ans
- 1. Wistle
 - 2. Cereal
 - 3. Tunnel
 - 4. Rustle

Question ID : 65497829563
Status : Answered
Chosen Option : 1

Q.20 The following sentence has been split into four segments. Identify the segment that contains a grammatical error.

I wish / I am / the Principal / of the school!

- Ans
- 1. I wish
 - 2. of the school
 - 3. I am
 - 4. the Principal

Question ID : 65497829565
Status : Answered
Chosen Option : 3

Comprehension:

In the following passage, some words have been deleted. Read the passage carefully and select the most appropriate option to fill in each blank.

Writing is a form (1)_____, and neat handwriting is important when writing (2)_____ that will be read by someone else. We (3)_____ by the quality of our handwriting, and (4)_____ our handwriting is poor, we (5)_____ to be lazy or incompetent.

SubQuestion No : 21

Q.21 Select the most appropriate option to fill in blank no. 1.

- Ans 1. in expression
 2. to expressing
 3. for expression
 4. of expression

Question ID : 65497829578
Status : Answered
Chosen Option : 4

Comprehension:

In the following passage, some words have been deleted. Read the passage carefully and select the most appropriate option to fill in each blank.

Writing is a form (1)_____, and neat handwriting is important when writing (2)_____ that will be read by someone else. We (3)_____ by the quality of our handwriting, and (4)_____ our handwriting is poor, we (5)_____ to be lazy or incompetent.

SubQuestion No : 22

Q.22 Select the most appropriate option to fill in blank no. 2.

- Ans 1. nothing
 2. everything
 3. anything
 4. each thing

Question ID : 65497829579
Status : Answered
Chosen Option : 3

Comprehension:

In the following passage, some words have been deleted. Read the passage carefully and select the most appropriate option to fill in each blank.

Writing is a form (1)_____, and neat handwriting is important when writing (2)_____ that will be read by someone else. We (3)_____ by the quality of our handwriting, and (4)_____ our handwriting is poor, we (5)_____ to be lazy or incompetent.

SubQuestion No : 23

Q.23 Select the most appropriate option to fill in blank no. 3.

- Ans 1. should be often judged
 2. are often judged
 3. have been often judged
 4. judged often

Question ID : 65497829580
Status : Answered
Chosen Option : 2

Comprehension:

In the following passage, some words have been deleted. Read the passage carefully and select the most appropriate option to fill in each blank.

Writing is a form (1)_____, and neat handwriting is important when writing (2)_____ that will be read by someone else. We (3)_____ by the quality of our handwriting, and (4)_____ our handwriting is poor, we (5)_____ to be lazy or incompetent.

SubQuestion No : 24

Q.24 Select the most appropriate option to fill in blank no. 4.

- Ans 1. as
 2. while
 3. where
 4. when

Question ID : 65497829581

Status : Answered

Chosen Option : 4

Comprehension:

In the following passage, some words have been deleted. Read the passage carefully and select the most appropriate option to fill in each blank.

Writing is a form (1)_____, and neat handwriting is important when writing (2)_____ that will be read by someone else. We (3)_____ by the quality of our handwriting, and (4)_____ our handwriting is poor, we (5)_____ to be lazy or incompetent.

SubQuestion No : 25

Q.25 Select the most appropriate option to fill in blank no. 5.

- Ans 1. appear
 2. see
 3. expose
 4. look

Question ID : 65497829582

Status : Answered

Chosen Option : 1

Section : Part D Hindi

Q.1 दिए गए वाक्य में रेखांकित खंड को प्रतिस्थापित करने के लिए सबसे उपयुक्त विकल्प का चयन करें। यदि इसे प्रतिस्थापित करने की आवश्यकता नहीं है, तो विकल्प 'किसी बदलाव की आवश्यकता नहीं है' का चयन करें।

भाई साहब को मुझे एक रुपया दिया है।

- Ans 1. भाई साहब द्वारा
 2. भाई साहब
 3. किसी बदलाव की आवश्यकता नहीं है।
 4. भाई साहब ने

Question ID : 65497829593

Status : Not Answered

Chosen Option : --

Q.2 रिक्त स्थान की पूर्ति के लिए सबसे उपयुक्त शब्द का चयन करें-

वह वृक्ष की _____ डाली काट रहा था।

- Ans
- 1. सुखी
 - 2. सखी
 - 3. सूखी
 - 4. सामान्य

Question ID : 65497829587
Status : Not Answered
Chosen Option : --

Q.3 रिक्त स्थान की पूर्ति के लिए सबसे उपयुक्त शब्द का चयन करें-

रोगी ने चिकित्सक से _____ लिया।

- Ans
- 1. मत्रणा
 - 2. आज्ञा
 - 3. परामर्श
 - 4. अनुदान

Question ID : 65497829586
Status : Not Answered
Chosen Option : --

Q.4 दिए गए वाक्य का वह भाग ज्ञात करें जिसमें कोई त्रुटि है। यदि कोई त्रुटि नहीं है, तो 'कोई त्रुटि नहीं है' चुनें।

कई रेलवे के(1)/ कर्मचारियों की(2)/ गिरफ्तारी हुई।(3)/ कोई त्रुटि नहीं है।(4)

- Ans
- 1. 3
 - 2. 1
 - 3. 4
 - 4. 2

Question ID : 65497829594
Status : Not Answered
Chosen Option : --

Q.5 दिए गए वाक्य में रेखांकित खंड को प्रतिस्थापित करने के लिए सबसे उपयुक्त विकल्प का चयन करें। यदि इसे प्रतिस्थापित करने की आवश्यकता नहीं है, तो विकल्प 'किसी बदलाव की आवश्यकता नहीं है' का चयन करें।

रात दस बजे से दिल्ली में जक्शन से हम कश्मीर मेल में सवार हुए।

- Ans
- 1. किसी बदलाव की आवश्यकता नहीं है।
 - 2. रात दस बजे तक दिल्ली में जक्शन में हम
 - 3. रात दस बजे से, दिल्ली के जक्शन से हम
 - 4. रात दस बजे, दिल्ली के जक्शन से हम

Question ID : 65497829588
Status : Not Answered
Chosen Option : --

Q.6 'ऊपर की ओर जाने वाला' वाक्यांश के लिए एक शब्द होगा-

- Ans
- 1. आगामी
 - 2. प्रतिगामी
 - 3. ऊर्ध्वगामी
 - 4. अधोगामी

Question ID : 65497829601
Status : Not Answered
Chosen Option : --

Q.7 उस विकल्प का चयन करें जो निम्न मुहावरे का अर्थ व्यक्त करता है।

कलेजा ठडा होना

- Ans
- 1. मन में शान्ति होना
 - 2. धीरज रखना
 - 3. प्रिय होना
 - 4. बहुत दुखी होना

Question ID : 65497829592
Status : Not Answered
Chosen Option : --

Q.8 दिए गए वाक्यांश के लिए एक शब्द दीजिए।

प्रार्थना या निवेदन करने वाला

- Ans
- 1. प्रार्थी
 - 2. स्तुति
 - 3. भक्त वत्सल
 - 4. भजन

Question ID : 65497829583
Status : Not Answered
Chosen Option : --

Q.9 दिए गए शब्द का विलोम चुनें।

निर्मल

- Ans
- 1. मैला
 - 2. गदा
 - 3. मलिन
 - 4. विमल

Question ID : 65497829591
Status : Not Answered
Chosen Option : --

Q.10 'विशाल' का विलोम शब्द होगा-

- Ans
- 1. विराट
 - 2. क्षणिक
 - 3. लघु
 - 4. विकराल

Question ID : 65497829600
Status : Not Answered
Chosen Option : --

Q.11 दिए गए शब्द का समानार्थी शब्द चुनें-

युक्ति

- Ans 1. युक्त
 2. उपाय
 3. जुड़ा हुआ
 4. सलग्न

Question ID : 65497829595
Status : Not Answered
Chosen Option : --

Q.12 सही वर्तनी वाले शब्द का चयन करें।

- Ans 1. प्रलहाद
 2. प्रहलाद
 3. प्रल्हाद
 4. पहलाद

Question ID : 65497829590
Status : Not Answered
Chosen Option : --

Q.13 चंद्रमा के समान मुखवाला - वाक्यांश के लिए एक शब्द लिखिए-

- Ans 1. दसमुख
 2. चंद्रमुख
 3. लौहपुरुष
 4. गदाधर

Question ID : 65497829598
Status : Not Answered
Chosen Option : --

Q.14 सही वर्तनी वाले शब्द का चयन करें।

- Ans 1. वनस्पति
 2. बनस्पती
 3. वनस्पती
 4. वनास्पती

Question ID : 65497829589
Status : Not Answered
Chosen Option : --

Q.15 दिये गये वाक्य में रेखांकित अश को प्रतिस्थापित करने के लिए सबसे उपयुक्त विकल्प का चयन करें।

उसे व्याकरण का अच्छा बोध है।

- Ans 1. आभास
 2. ज्ञान
 3. समझ
 4. भान

Question ID : 65497829596
Status : Not Answered
Chosen Option : --

Q.16 रिक्त स्थान की पूर्ति के लिए सबसे उपयुक्त विकल्प का चयन करें।

श्याम को रोगी पर _____ आ गई।

- Ans 1. दया
 2. क्षमा
 3. कृपा
 4. अनुकपा

Question ID : 65497829602
Status : Not Answered
Chosen Option : --

Q.17 दिए गए वाक्य का वो भाग ज्ञात करें जिसमें कोई त्रुटि है। यदि कोई त्रुटि नहीं है, तो 'कोई त्रुटि नहीं है' चुनें।

शकीला भोपाली (1)\ प्रसिद्ध कव्वाली (2)\ गायकी हैं (3)\ कोई त्रुटि नहीं है (4)

- Ans 1. 2
 2. 4
 3. 3
 4. 1

Question ID : 65497829584
Status : Not Answered
Chosen Option : --

Q.18 दिये गये वाक्य के किस भाग में त्रुटि है?

मैंने सारा माल उसके हाथ में बेच दिया है।

- Ans 1. मैंने सारा माल
 2. दिया है।
 3. उसके हाथ में
 4. बेच

Question ID : 65497829599
Status : Not Answered
Chosen Option : --

Q.19 'आग में कूदना' मुहावरे का सही अर्थ है-

- Ans 1. मूर्ख होना
 2. मदद करना
 3. जान जोखिम में डालना
 4. पश्चाताप करना

Question ID : 65497829597
Status : Not Answered
Chosen Option : --

Q.20 दिए गए शब्द का समानार्थी शब्द बताइए-

कोयल

- Ans 1. काक
 2. कीर
 3. शिखी
 4. कोकिला

Question ID : 65497829585

Status : Not Answered

Chosen Option : --

Comprehension:

भारतवर्ष (1) _____ है और देश में भाषाएँ चाहे जितनी भी हों, लेकिन उन सबके भीतर भारत की एक ही (2) _____ अपने को (3) _____ करती है। एक ही गङ्गा का जल है जो अनेक नदियों में बह रहा है, एक ही सूर्य का (4) _____ है जो अनेक पात्रों में जगमगा रहा है और एक ही (5) _____ है जो अनेक छदों में फूट रहा है। वेद, उपनिषद्, रामायण और महाभारत – ये ही वे घाट हैं जहाँ पर हमारी सभी भाषाएँ पानी पीती हैं।

निम्न प्रश्नों के उत्तर उपरोक्त गद्यांश के आधार पर दीजिए।

SubQuestion No : 21

Q.21 गद्यांश के रिक्त स्थान (1) के लिए सर्वाधिक उपयुक्त शब्द होगा-

- Ans 1. भिन्न
 2. एक
 3. अनेक
 4. प्रत्येक

Question ID : 65497829604

Status : Not Answered

Chosen Option : --

Comprehension:

भारतवर्ष (1) _____ है और देश में भाषाएँ चाहे जितनी भी हों, लेकिन उन सबके भीतर भारत की एक ही (2) _____ अपने को (3) _____ करती है। एक ही गङ्गा का जल है जो अनेक नदियों में बह रहा है, एक ही सूर्य का (4) _____ है जो अनेक पात्रों में जगमगा रहा है और एक ही (5) _____ है जो अनेक छदों में फूट रहा है। वेद, उपनिषद्, रामायण और महाभारत – ये ही वे घाट हैं जहाँ पर हमारी सभी भाषाएँ पानी पीती हैं।

निम्न प्रश्नों के उत्तर उपरोक्त गद्यांश के आधार पर दीजिए।

SubQuestion No : 22

Q.22 गद्यांश के रिक्त स्थान (2) के लिए सर्वाधिक उपयुक्त शब्द होगा-

- Ans 1. परमात्मा
 2. आत्मा
 3. निष्ठा
 4. प्रतिष्ठा

Question ID : 65497829605

Status : Not Answered

Chosen Option : --

Comprehension:

भारतवर्ष (1) _____ है और देश में भाषाएँ चाहे जितनी भी हों, लेकिन उन सबके भीतर भारत की एक ही (2) _____ अपने को (3) _____ करती है। एक ही गगोत्री का जल है जो अनेक नदियों में बह रहा है, एक ही सूर्य का (4) _____ है जो अनेक पात्रों में जगमगा रहा है और एक ही (5) _____ है जो अनेक छदों में फूट रहा है। वेद, उपनिषद्, रामायण और महाभारत – ये ही वे घाट हैं जहाँ पर हमारी सभी भाषाएँ पानी पीती हैं।

निम्न प्रश्नों के उत्तर उपरोक्त गद्यांश के आधार पर दीजिए।

SubQuestion No : 23

Q.23 गद्यांश के रिक्त स्थान (3) के लिए सर्वाधिक उपयुक्त शब्द होगा-

- Ans 1. सशोधित
 2. अभिव्यक्त
 3. अर्पित
 4. प्रदर्शित

Question ID : 65497829606

Status : Not Answered

Chosen Option : --

Comprehension:

भारतवर्ष (1) _____ है और देश में भाषाएँ चाहे जितनी भी हों, लेकिन उन सबके भीतर भारत की एक ही (2) _____ अपने को (3) _____ करती है। एक ही गगोत्री का जल है जो अनेक नदियों में बह रहा है, एक ही सूर्य का (4) _____ है जो अनेक पात्रों में जगमगा रहा है और एक ही (5) _____ है जो अनेक छदों में फूट रहा है। वेद, उपनिषद्, रामायण और महाभारत – ये ही वे घाट हैं जहाँ पर हमारी सभी भाषाएँ पानी पीती हैं।

निम्न प्रश्नों के उत्तर उपरोक्त गद्यांश के आधार पर दीजिए।

SubQuestion No : 24

Q.24 गद्यांश के रिक्त स्थान (4) के लिए सर्वाधिक उपयुक्त शब्द होगा-

- Ans 1. रस
 2. चित्र
 3. दर्पण
 4. बिम्ब

Question ID : 65497829607

Status : Not Answered

Chosen Option : --

Comprehension:

भारतवर्ष (1) _____ है और देश में भाषाएँ चाहे जितनी भी हों, लेकिन उन सबके भीतर भारत की एक ही (2) _____ अपने को (3) _____ करती है। एक ही गगोत्री का जल है जो अनेक नदियों में बह रहा है, एक ही सूर्य का (4) _____ है जो अनेक पात्रों में जगमगा रहा है और एक ही (5) _____ है जो अनेक छदों में फूट रहा है। वेद, उपनिषद्, रामायण और महाभारत – ये ही वे घाट हैं जहाँ पर हमारी सभी भाषाएँ पानी पीती हैं।

निम्न प्रश्नों के उत्तर उपरोक्त गद्यांश के आधार पर दीजिए।

SubQuestion No : 25

Q.25 गद्यांश के रिक्त स्थान (5) के लिए सर्वाधिक उपयुक्त शब्द होगा-

- Ans 1. भाव
 2. नाम
 3. बल
 4. अर्थ

Question ID : 65497829608

Status : Not Answered

Chosen Option : --

**SSC
GD**

Previous Year Paper
16 Nov 2021 Shift 3

Exam Date	16/11/2021
Exam Time :	4:00 PM - 5:30 PM
Subject	Constable GD 2021

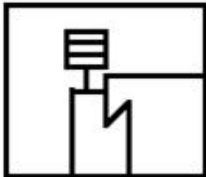
Section : Part A General Intelligence and Reasoning

Q.1 Select the option in which the given figure is embedded (rotation is NOT allowed).

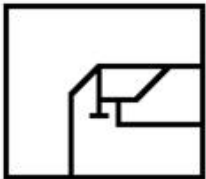


Ans

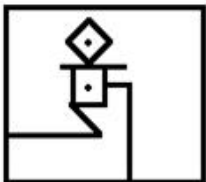
✗ 1.



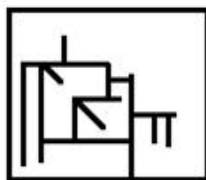
✗ 2.



✗ 3.



✓ 4.



Question ID : 65497828854

Status : Answered

Chosen Option : 4

Q.2 Select the option that is related to the third number in the same way as the second number is related to the first number and the sixth number is related to the fifth number.

16 : 120 :: 18 : ? :: 22 : 231

- Ans
- 1. 134
 - 2. 153
 - 3. 531
 - 4. 513

Question ID : 65497828851
Status : Answered
Chosen Option : 2

Q.3 Select the correct mirror image of the given combination when the mirror is placed to its right side.

4 2 5 3 e f

- Ans
- 1.
 - 2.
 - 3.
 - 4.

Question ID : 65497828871
Status : Answered
Chosen Option : 1

Q.4 Select the letter-cluster from among the given options that can replace the question mark (?) in the following series.

DOK, ENL, FMM, GLN, ?

- Ans
- 1. HLP
 - 2. HKO
 - 3. GHP
 - 4. GLO

Question ID : 65497828859
Status : Answered
Chosen Option : 2

Q.5 Select the number from among the given options that can replace the question mark (?) in the following series.

14, 15, 24, 49, 98, 179, ?

- Ans
- 1. 312
 - 2. 290
 - 3. 300
 - 4. 340

Question ID : 65497828870
Status : Answered
Chosen Option : 3

Q.6 Select the correct option that indicates the arrangement of the given words in the order in which they appear in an English dictionary.

1. Pitted
2. Pivot
3. Pixie
4. Pivotal
5. pity

Ans 1. 1, 5, 4, 2, 3
 2. 1, 2, 3, 4, 5
 3. 2, 1, 4, 5, 3
 4. 1, 5, 2, 4, 3

Question ID : 65497828855
Status : Answered
Chosen Option : 4

Q.7 Select the option that is related to the third letter-cluster in the same way as the second letter-cluster is related to the first letter-cluster.

HOST : FMQR :: DRON : ?

Ans 1. BPML
 2. BLMP
 3. BPLM
 4. BMPL

Question ID : 65497828847
Status : Answered
Chosen Option : 1

Q.8 (i) Anupama, Bavya, Chahal, Dilip, Sourab, Varun and Govind are sitting in a circle, facing the centre and playing cards.
(ii) Sourab is the neighbour of Anupama and Dilip.
(iii) Govind is not between Varun and Chahal.
(iv) Varun is to the immediate right of Anupama.
Which of the following pairs of persons is NOT sitting adjacent to each other?

Ans 1. Govind, Dilip
 2. Bavya, Anupama
 3. Chahal, Bavya
 4. Dilip, Sourab

Question ID : 65497828850
Status : Answered
Chosen Option : 2

Q.9 Read the given statements and conclusions carefully. Assuming that the information given in the statements is true, even if it appears to be at variance with commonly known facts, decide which of the given conclusions logically follow(s) from the statements.

Statements:

No boy is an engineer.
No engineer is a driver.
All girls are boys.

Conclusions:

I. All boys are drivers.
II. No girl is an engineer.

- Ans**
- 1. Only conclusion I follows
 - 2. Only conclusion II follows
 - 3. Both conclusions I and II follow
 - 4. Either conclusion I or II follows

Question ID : 65497828863

Status : Answered

Chosen Option : 2

Q.10 Select the combination of letters that when sequentially placed in the blanks of the given series will complete the series.

D _ _ S H T _ _ R I S H _ _ D R I _ _ T I D R I S _ _ I

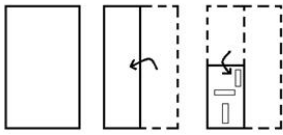
- Ans**
- 1. RDIITISHHT
 - 2. RDIISHTIHT
 - 3. RIIDTISHHT
 - 4. RITIDTSHHT

Question ID : 65497828856

Status : Answered

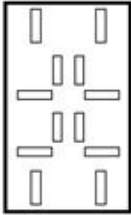
Chosen Option : 3

Q.11 The sequence of folding a piece of paper and the manner in which the folded paper has been cut is shown in the following figures. How would this paper look when unfolded?

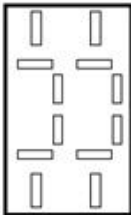


Ans


✗ 1.



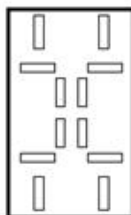
✗ 2.



✗ 3.



✓ 4.



Question ID : 65497828866

Status : Answered

Chosen Option : 3

Q.12 Select the number from among the given options that can replace the question mark (?) in the following series.

209, 205, 196, 180, ?, 119

Ans ✓ 1. 155

✗ 2. 160

✗ 3. 149

✗ 4. 165

Question ID : 65497828857

Status : Answered

Chosen Option : 1

Q.13 In a certain code language, MORSEL is written as LESROM. How will GATEWAY be written in that language?

- Ans 1. YAWETAG
 2. AWYETAG
 3. YAWTEAG
 4. YAWATEG

Question ID : 65497828861
Status : Answered
Chosen Option : 1

Q.14 'Cricket' is related to 'LBW' in the same way as 'Chess' is related to '_____'.

- Ans 1. Deuce
 2. Hit wicket
 3. Checkmate
 4. Backstroke

Question ID : 65497828860
Status : Answered
Chosen Option : 3

Q.15 Seema, pointing towards a photo, said to me, "He is the son of your father." What is the relation of the person in the photo with me?

- Ans 1. Uncle
 2. Grandfather
 3. Brother
 4. Father

Question ID : 65497828849
Status : Answered
Chosen Option : 3

Q.16 Select the option in which the numbers are related in the same way as are the numbers in the given set.

11, 4, 137

- Ans 1. 10, 5, 148
 2. 9, 8, 145
 3. 12, 7, 190
 4. 15, 14, 205

Question ID : 65497828864
Status : Answered
Chosen Option : 3

Q.17 In a certain code language, APRIL is written as $\times\beta\alpha@$ and MARCH is written as $\epsilon+\beta\textcircled{\infty}$. How will PARAM be written in that language?

- Ans 1. $\times+\beta+\epsilon$
 2. $\times+\epsilon\beta$
 3. $\beta\times+\textcircled{\infty}$
 4. $+\beta\times+\epsilon$

Question ID : 65497828848
Status : Answered
Chosen Option : 1

Q.18 If 21 March 2007 is a Wednesday, what would be the day of the week on 25 May 2015?

- Ans
- 1. Tuesday
 - 2. Wednesday
 - 3. Monday
 - 4. Sunday

Question ID : 65497828865
Status : Answered
Chosen Option : 3

Q.19 If 'A' denotes 'addition', 'B' denotes 'multiplication', 'C' denotes 'subtraction', and 'D' denotes 'division', then what will be the value of the following expression?

60 D 2 A 3 B 6 C 5 C (4 B 3)

- Ans
- 1. 41
 - 2. 31
 - 3. 35
 - 4. 45

Question ID : 65497828852
Status : Answered
Chosen Option : 2

Q.20 Six girls A, B, C, D, E and F stand in two vertical lines; all girls face the north. three girls are there in each line. E is immediately behind D. F is to the left of A. C is just ahead of B. A is immediately ahead of D. Which two girls stand in the last position of lines?

- Ans
- 1. A, B
 - 2. C, E
 - 3. A, F
 - 4. B, E

Question ID : 65497828862
Status : Answered
Chosen Option : 4

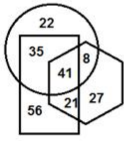
Q.21 Three different positions of the same dice are shown. Select the number/symbol that will be on the face opposite to the face showing the symbol '&'.



- Ans
- 1. 9
 - 2. \$
 - 3. %
 - 4. #

Question ID : 65497828853
Status : Answered
Chosen Option : 3

Q.22 In the following diagram, the 'hexagon' stands for 'engineers', the 'circle' stands for 'music lovers', and the 'rectangle' stands for 'morning walkers'. The numbers given in the different segments represent the number of persons of that category.




How many morning walkers are music-lovers but are NOT engineers?

- Ans
- 1. 21
 - 2. 35
 - 3. 41
 - 4. 8

Question ID : 65497828867
 Status : Answered
 Chosen Option : 2

Q.23 Select the figure from among the given options that can replace the question mark (?) in the following figure and complete the pattern (rotation is NOT allowed).



- Ans
- 1.
 - 2.
 - 3.
 - 4.

Question ID : 65497828858
 Status : Answered
 Chosen Option : 4

Q.24 Four letter-clusters have been given, out of which three are alike in some manner and one is different. Select the letter-cluster that is different.

- Ans
- 1. AEU
 - 2. AEI
 - 3. IOU
 - 4. ZDK

Question ID : 65497828868
 Status : Answered
 Chosen Option : 4

Q.25 In a certain code language, ALARMING is coded as 150. How will FLOATER be coded in that language?

- Ans
- 1. 124
 - 2. 156
 - 3. 141
 - 4. 154

Question ID : 65497828869
Status : Answered
Chosen Option : 4

Section : Part B General Knowledge and General Awareness

Q.1 The Central Pollution Control Board (CPCB) was constituted under _____.

- Ans
- 1. The Air (Prevention and Control of Pollution) Act, 1981
 - 2. The Water (Prevention and Control of Pollution) Act, 1974
 - 3. The National Environmental Tribunal Act, 1995
 - 4. The National Environment Appellate Authority Act, 1997

Question ID : 65497828888
Status : Answered
Chosen Option : 1

Q.2 In which of the following years was the first cotton textile mill established in Bombay?

- Ans
- 1. 1845
 - 2. 1867
 - 3. 1876
 - 4. 1854

Question ID : 65497828873
Status : Not Answered
Chosen Option : --

Q.3 Which of the following banks features in the Fortune Global 500 list 2021?

- Ans
- 1. State Bank of India
 - 2. Bank of Baroda
 - 3. ICICI Bank
 - 4. HDFC Bank

Question ID : 65497828896
Status : Not Answered
Chosen Option : --

Q.4 In October 2020, World Bank expected India's GDP to contract by how much per cent in the fiscal year 2020-21?

- Ans
- 1. 9.5
 - 2. 9.8
 - 3. 9
 - 4. 9.6

Question ID : 65497828877
Status : Not Answered
Chosen Option : --

Q.5 The religious festival of Ganesh Chaturthi is especially associated with which of the following states?

- Ans
- 1. Punjab
 - 2. Maharashtra
 - 3. Uttar Pradesh
 - 4. Haryana

Question ID : 65497828879
Status : Answered
Chosen Option : 2

Q.6 Which of the following statements is true?

- Ans
- 1. Bases are bitter in taste.
 - 2. Acids change the colour of red litmus to blue.
 - 3. Acids are salty in taste.
 - 4. Bases change the colour of the blue litmus to red.

Question ID : 65497828883
Status : Answered
Chosen Option : 1

Q.7 Talaja Caves are located in the state of _____.

- Ans
- 1. Madhya Pradesh
 - 2. Maharashtra
 - 3. Andhra Pradesh
 - 4. Gujarat

Question ID : 65497828890
Status : Not Answered
Chosen Option : --

Q.8 11 July is observed as _____ every year.

- Ans
- 1. World Health Day
 - 2. World Environment Day
 - 3. World Population Day
 - 4. World Water Day

Question ID : 65497828894
Status : Not Answered
Chosen Option : --

Q.9 In which of the following states are the Abor hills located?

- Ans
- 1. West Bengal
 - 2. Arunachal Pradesh
 - 3. Assam
 - 4. Sikkim

Question ID : 65497828878
Status : Answered
Chosen Option : 3

Q.10 Diego Maradona, the great football legend, died in November 2020. Which of the following countries did he represent?

- Ans
- 1. Brazil
 - 2. France
 - 3. Spain
 - 4. Argentina

Question ID : 65497828876
Status : Answered
Chosen Option : 1

Q.11 When was the Imperial Bank of India established?

- Ans
- 1. 1947
 - 2. 1921
 - 3. 1919
 - 4. 1948

Question ID : 65497828886
Status : Answered
Chosen Option : 2

Q.12 Prime Minister Narendra Modi visited Bangladesh in March 2021 in connection with the commemoration of three events. Which of the following is NOT one of them?

- Ans
- 1. 50 years of Bangladesh's war of liberation.
 - 2. Birth centenary of Sheikh Mujibur Rahman.
 - 3. 10 years of signing of the India-Bangladesh Land Boundary Agreement (LBA).
 - 4. 50 years of the establishment of diplomatic ties between India and Bangladesh.

Question ID : 65497828889
Status : Answered
Chosen Option : 4

Q.13 Actress Kangana Ranaut won the 'Best Actress' award at the 67th National Film Awards, 2019 for the films _____.

- Ans
- 1. 'Panga' and 'Judgementall Hai Kya'
 - 2. 'Manikarn ka: The Queen of Jhansi' and 'Panga'
 - 3. 'Judgementall Hai Ky and 'Manikarn ka: The Queen of Jhansi'
 - 4. 'Judgementall Hai Kya' and 'Simran'

Question ID : 65497828892
Status : Answered
Chosen Option : 2

Q.14 Water which is purified and fit for drinking is known as _____.

- Ans
- 1. hard water
 - 2. potable water
 - 3. diluted water
 - 4. river water

Question ID : 65497828880
Status : Answered
Chosen Option : 2

Q.15 Who among the following became the first Mughal emperor after defeating Ibrahim Lodi?

- Ans
- 1. Nadir Shah
 - 2. Shah Jahan
 - 3. Babur
 - 4. Aurangzeb

Question ID : 65497828872
Status : Answered
Chosen Option : 3

Q.16 The _____ Schedule of the Constitution of India added by the Constitution (Fifty-Second Amendment) Act, 1985 deals with the disqualification of a person for being a member of either house of Parliament or the Legislative Assembly or Legislative Council of a State, on the ground of defection.

- Ans
- 1. Tenth
 - 2. Sixth
 - 3. Third
 - 4. Fifth

Question ID : 65497828874
Status : Answered
Chosen Option : 1

Q.17 In November 2020, Twitter launched tweets that disappear in 24 hours called ' _____ ' globally.

- Ans
- 1. fleets
 - 2. bleats
 - 3. meets
 - 4. greets

Question ID : 65497828885
Status : Not Answered
Chosen Option : --

Q.18 Shariatullah Khan was a part of the _____ against the British.

- Ans
- 1. Faqir/Fakir Rebellion
 - 2. Wahabi Movement
 - 3. Sanyasi Rebellion
 - 4. Farazi/Faraizi Movement

Question ID : 65497828887
Status : Answered
Chosen Option : 2

Q.19 Which of the following is NOT a consequence of deforestation?

- Ans
- 1. Decrease in level of ground water
 - 2. Increase in pollution level on earth
 - 3. Increase in level of oxygen in the atmosphere
 - 4. Disturbance in the overall balance of nature

Question ID : 65497828881
Status : Answered
Chosen Option : 3

Q.20 _____, the newly elected Prime Minister of Somalia, took office in September 2020.

- Ans
- 1. Omar Sharmarke
 - 2. Hassan Ali Khaire
 - 3. Abdi Farah Shirdon
 - 4. Mohamed Hussein Roble

Question ID : 65497828882
Status : Not Answered
Chosen Option : --

Q.21 Mir Jafar was reinstated as the Nawab of Bengal in the year _____.

- Ans
- 1. 1764
 - 2. 1647
 - 3. 1674
 - 4. 1746

Question ID : 65497828884
Status : Answered
Chosen Option : 1

Q.22 As of September 2021, India has won _____ medals in the Paralympic Games since their introduction in 1960.

- Ans
- 1. 9 gold, 10 silver and 12 bronze
 - 2. 7 gold, 9 silver and 11 bronze
 - 3. 9 gold, 12 silver and 10 bronze
 - 4. 7 gold, 11 silver and 9 bronze

Question ID : 65497828895
Status : Answered
Chosen Option : 4

Q.23 As per the Census of India–2011, there are _____ statutory towns in the country.

- Ans
- 1. 10,756
 - 2. 1,362
 - 3. 4,041
 - 4. 7,935

Question ID : 65497828891
Status : Not Answered
Chosen Option : --

Q.24 The Scheme of Mega Food Park aims at providing a mechanism of direct linkage from farm to processing and then to consumer markets through a network of collection centres and primary processing centres. In which of the following states did Narendra Singh Tomar virtually inaugurate Mega Food Park in November 2020?

- Ans
- 1. Gujarat
 - 2. Rajasthan
 - 3. Punjab
 - 4. Odisha

Question ID : 65497828875
Status : Answered
Chosen Option : 3

Q.25 Who among the following is an Indian badminton player?

- Ans 1. Satish Kumar
 2. Ashish Kumar
 3. B Sai Praneeth
 4. Vikas Krishan

Question ID : 65497828893
Status : Answered
Chosen Option : 3

Section : Part C Elementary Mathematics

Q.1 A loss of 12% gets converted into a profit of 8.5% when the selling price of an article is increased by ₹164. The cost price of the article is:

- Ans 1. ₹760
 2. ₹840
 3. ₹850
 4. ₹800

Question ID : 65497828902
Status : Answered
Chosen Option : 4

Q.2 Pens are bought by a shopkeeper at the rate of ₹1,200 for 150 pens and sold at the rate of ₹1,620 for 180 pens. His profit or loss per cent is:

- Ans 1. Profit 12%
 2. Profit 12.5%
 3. Loss 12%
 4. Profit 14%

Question ID : 65497828900
Status : Answered
Chosen Option : 2

Q.3 The value of $8 - [88 \div 2 \text{ of } 11 - (22 - 72 \div 4)]$ is:

- Ans 1. 0
 2. 6
 3. 4
 4. 8

Question ID : 65497828899
Status : Answered
Chosen Option : 4

Q.4 If the compound interest on a certain sum for 2 years at 4% per annum is ₹1530. What would be the simple interest on the same sum for the same period and at the same rate?

- Ans**
- 1. ₹1400
 - 2. ₹1500
 - 3. ₹1350
 - 4. ₹1510

Question ID : 65497828920
Status : Answered
Chosen Option : 2

Q.5 A takes 15 days to complete $\frac{5}{7}$ of a work. With the help of B, they finish the whole work in 12 days. In how many days, B alone will complete the same work?

- Ans**
- 1. 18 days
 - 2. 20 days
 - 3. 28 days
 - 4. 25 days

Question ID : 65497828901
Status : Answered
Chosen Option : 3

Q.6 A shopkeeper sells an item for ₹1,638 after offering a discount of 16% on its list price. Had he not offered any discount, he would have earned a profit of 30%. What is the cost price (in ₹) of the article?

- Ans**
- 1. 1,500
 - 2. 1,425
 - 3. 1,400
 - 4. 1,450

Question ID : 65497828917
Status : Answered
Chosen Option : 1

Q.7 There are five numbers. The average of the first four numbers is $\frac{5}{6}$ of the fifth number. If the average of all the five numbers is 26, then what is the fifth number?

- Ans**
- 1. 28
 - 2. 29
 - 3. 30
 - 4. 32

Question ID : 65497828911
Status : Answered
Chosen Option : 3

Q.8 The HCF of 2091, 3485 and 4879 is x . The sum of the digits of x is:

- Ans**
- 1. 20
 - 2. 22
 - 3. 19
 - 4. 23

Question ID : 65497828910
Status : Answered
Chosen Option : 1

Q.9 Working together, A, B and C can do a certain work in 10 days. A is 20% more efficient than B, and C is 50% less than efficient than B. B alone can complete the same work in:

- Ans**
- 1. $22\frac{1}{2}$ days
 - 2. 27 days
 - 3. 30 days
 - 4. 25 days

Question ID : 65497828915
Status : Answered
Chosen Option : 2

Q.10 A trader marked the price of an article so as to earn a profit of 28% on its cost price. He sold it by giving 15% discount on its marked price. What was his actual profit percentage?

- Ans**
- 1. 13%
 - 2. 9%
 - 3. 8.8%
 - 4. 12.5%

Question ID : 65497828912
Status : Answered
Chosen Option : 3

Q.11 The lengths of the sides of a right-angled triangle are in the ratio 5 : 12 : 13 and its perimeter is 90 cm. What is the area (in cm^2) of the triangle?

- Ans**
- 1. 540
 - 2. 780
 - 3. 270
 - 4. 702

Question ID : 65497828921
Status : Answered
Chosen Option : 3

Q.12 There is 70% increase in an amount in 7 years at simple interest. What will be the compound interest on ₹8,000 after 3 years at the same rate of interest?

- Ans**
- 1. ₹2,640
 - 2. ₹2,548
 - 3. ₹2,654
 - 4. ₹2,648

Question ID : 65497828903
Status : Answered
Chosen Option : 4

Q.13 The income of A is 70% more than the income of B, and the income of C is 80% of the combined income of A and B. By what percentage is the income of A less than that of C? (Correct to one decimal place)

- Ans**
- 1. 27.1%
 - 2. 20.4%
 - 3. 21.3%
 - 4. 19.8%

Question ID : 65497828913
Status : Answered
Chosen Option : 2

Q.14 The prices of two woolen jackets A and B are in the ratio 7 : 9. If jacket A costs ₹380 less than jacket B, then find the price of jacket B.

- Ans**
- 1. ₹1680
 - 2. ₹1330
 - 3. ₹1710
 - 4. ₹1650

Question ID : 65497828919
Status : Answered
Chosen Option : 3

Q.15 If three numbers are in the ratio of 3 : 5 : 7 and their LCM is 2415, what is the difference between the second number and the first number?

- Ans**
- 1. 46
 - 2. 92
 - 3. 23
 - 4. 69

Question ID : 65497828904
Status : Answered
Chosen Option : 1

Q.16 A wire encloses an area of 18634 cm^2 , when it is bent in the form of a circle. The same wire is now bent to form a rectangle whose sides are in the ratio $5 : 6$. The length (in cm) of the shorter side of the rectangle is (Take $\pi = \frac{22}{7}$):

- Ans
- 1. 100
 - 2. 132
 - 3. 110
 - 4. 154

Question ID : 65497828898
Status : Answered
Chosen Option : 3

Q.17 If the average of the following six observations: $x + 2, x + 5, x + 8, x + 11, x + 14$ and $x + 17$ is 12.5, what is the average of the first three observations?

- Ans
- 1. 3
 - 2. 9
 - 3. 8
 - 4. 6

Question ID : 65497828905
Status : Answered
Chosen Option : 3

Q.18 By selling 18 oranges for ₹151.20, a man loses 20%. How many oranges should he sell for ₹19 to earn a profit of 30%?

- Ans
- 1. 50
 - 2. 65
 - 3. 60
 - 4. 45

Question ID : 65497828918
Status : Answered
Chosen Option : 3

Q.19 A car covers the first 41 km of its journey in 45 min and covers the remaining 23 km in 35 min. What is the average speed (in m/sec) of the car?

- Ans
- 1. $13\frac{1}{3}$
 - 2. 15
 - 3. 16
 - 4. $16\frac{2}{3}$

Question ID : 65497828909
Status : Answered
Chosen Option : 1

Q.20 Somu has borrowed ₹10,000 from a money lender with simple interest at a rate of 7% per 6 months. How much amount will he pay to the money lender after 3 years?

- Ans
- 1. ₹13,000
 - 2. ₹14,200
 - 3. ₹12,500
 - 4. ₹12,100

Question ID : 65497828907
Status : Answered
Chosen Option : 2

Q.21 If a sum of ₹6225 is divided into three parts such that 4 times the first part is equal to 5 times the second part and 7 times the third part. The difference between the first and second part (in ₹) is:

- Ans
- 1. 525
 - 2. 300
 - 3. 600
 - 4. 450

Question ID : 65497828897
Status : Answered
Chosen Option : 1

Q.22 The value of $\left(\frac{7}{16} \div 10\frac{1}{2} \text{ of } 7\frac{1}{5}\right) \times 3\frac{3}{5} - 1\frac{1}{3} \times 1\frac{1}{8} \div \frac{1}{2} + \frac{3}{4}$ is:

- Ans
- 1. $-\frac{179}{48}$
 - 2. $\frac{61}{8}$
 - 3. $\frac{181}{24}$
 - 4. $-\frac{107}{48}$

Question ID : 65497828908
Status : Answered
Chosen Option : 4

Q.23 A boat can go 10 km upstream and 11 km downstream in a total time of 52 minutes. If the speed of the stream is 5 km/h, then what is the speed (in km/h) of the boat when going downstream?

- Ans
- 1. 30
 - 2. 20
 - 3. 35
 - 4. 25

Question ID : 65497828916
Status : Answered
Chosen Option : 4

Q.24 In a mixture of 75 litres, the ratio of milk to water is 3 : 2. If the ratio is to be 1 : 2, how much of water should be added?

- Ans
- 1. 65 litres
 - 2. 90 litres
 - 3. 60 litres
 - 4. 50 litres

Question ID : 65497828906
Status : Answered
Chosen Option : 3

Q.25 In 2021, a cricket team wants to win 80% of the matches out of 225 matches. Out of 120 matches already played, the success rate is 70%. What should be the success rate for the remaining matches in order to reach the target?

- Ans
- 1. $89\frac{5}{7}\%$
 - 2. 86%
 - 3. 90%
 - 4. $91\frac{3}{7}\%$

Question ID : 65497828914
Status : Answered
Chosen Option : 4

Section : Part D English

Q.1 Select the most appropriate option to fill in the blank.

The man felt exhausted after climbing a _____ of stairs.

- Ans
- 1. heap
 - 2. fleet
 - 3. pack
 - 4. flight

Question ID : 65497828941
Status : Not Answered
Chosen Option : --

Q.2 Select the most appropriate meaning of the given idiom.

Come to blows

- Ans
- 1. Insult someone
 - 2. Agree on a plan
 - 3. Get into a fight physically
 - 4. Return a favour

Question ID : 65497828939
Status : Not Answered
Chosen Option : --

Q.3 Parts of the given sentence have been given as options. One of them contains a grammatical error. Select the option that has the error.

Pray to the Almighty God with utmost devotion and help the needy and poored people.

- Ans
- 1. with utmost devotion
 - 2. help the needy
 - 3. to the Almighty God
 - 4. poored people

Question ID : 65497828930
Status : Not Answered
Chosen Option : --

Q.4 Select the INCORRECTLY spelt word.

- Ans
- 1. Quarantine
 - 2. Commitment
 - 3. Bouquet
 - 4. Procedure

Question ID : 65497828936
Status : Not Answered
Chosen Option : --

Q.5 The following sentence has been split into four segments. Identify the segment that contains a grammatical error.

I saw some / children playing happily / below the shade / of a tree.

- Ans
- 1. I saw some
 - 2. children playing happily
 - 3. below the shade
 - 4. of a tree

Question ID : 65497828933
Status : Not Answered
Chosen Option : --

Q.6 The following sentence has been split into four segments. Identify the segment that contains a grammatical error.

The man turned to him with a look of disapprove.

- Ans
- 1. The man
 - 2. with a look
 - 3. of disapprove
 - 4. turned to him

Question ID : 65497828924
Status : Not Answered
Chosen Option : --

Q.7 Select the most appropriate ANTONYM of the given word.

Criticise

- Ans 1. Analyse
 2. Approve
 3. Oppose
 4. Clarify

Question ID : 65497828934
Status : Not Answered
Chosen Option : --

Q.8 Select the most appropriate option to fill in the blank.

The Egyptians developed ways to prevent the dead body from _____.

- Ans 1. decaying
 2. destroying
 3. drooping
 4. dying

Question ID : 65497828927
Status : Not Answered
Chosen Option : --

Q.9 Select the option that will improve the underlined part of the given sentence. In case no improvement is needed, select 'No improvement required'.

My teacher said me that I would be famous one day.

- Ans 1. say to me
 2. told me
 3. No improvement required
 4. asked me

Question ID : 65497828940
Status : Not Answered
Chosen Option : --

Q.10 Select the most appropriate option to fill in the blank.

She is on six months' _____ leave.

- Ans 1. material
 2. paternity
 3. paternal
 4. maternity

Question ID : 65497828929
Status : Not Answered
Chosen Option : --

Q.11 Select the **INCORRECTLY** spelt word.

- Ans 1. Eraser
 2. Erode
 3. Erosion
 4. Eratic

Question ID : 65497828928
Status : Not Answered
Chosen Option : --

Q.12 Select the most appropriate **ANTONYM** of the given word.

Prudent

- Ans 1. Shrewd
 2. Wasteful
 3. Cautious
 4. Clever

Question ID : 65497828937
Status : Not Answered
Chosen Option : --

Q.13 Select the most appropriate option that can substitute the underlined segment in the given sentence. If there is no need to substitute it, select 'No substitution required'.

Using a word processor for writing have a number of advantages.

- Ans 1. for writing having number
 2. No substitution required
 3. to write have a number
 4. for writing has a number

Question ID : 65497828923
Status : Not Answered
Chosen Option : --

Q.14 Select the most appropriate meaning of the given idiom.

Cool as a cucumber

- Ans 1. Calm
 2. Lazy
 3. Wise
 4. Scared

Question ID : 65497828938
Status : Not Answered
Chosen Option : --

Q.15 Select the option that can be used as a one-word substitute for the given group of words.

That which is lawful

- Ans 1. Proper
 2. Illegal
 3. Valid
 4. Legal

Question ID : 65497828926
Status : Not Answered
Chosen Option : --

Q.16 Select the most appropriate synonym of the given word.

Recommend

- Ans 1. Oppose
 2. Adhere
 3. Reward
 4. Approve

Question ID : 65497828925
Status : Not Answered
Chosen Option : --

Q.17 Select the most appropriate option that can substitute the underlined segment in the given sentence. If there is no need to substitute it, select 'No substitution required'.

Wool and silk are materials those are the easiest to dye.

- Ans 1. that is easy
 2. that are the easiest
 3. No substitution required
 4. that are the easier

Question ID : 65497828922
Status : Not Answered
Chosen Option : --

Q.18 Select the option that can be used as a one-word substitute for the given group of words.

A piece of land where fruit trees are grown

- Ans 1. Pasture
 2. Orchard
 3. Barnyard
 4. Meadow

Question ID : 65497828935
Status : Not Answered
Chosen Option : --

Q.19 Select the most appropriate synonym of the given word.

Substitution

- Ans 1. Give
 2. Exchange
 3. Logical
 4. Hold

Question ID : 65497828931
Status : Not Answered
Chosen Option : --

Q.20 Select the option that can be used as a one-word substitute for the given group of words.

A volume containing several books previously published separately

- Ans 1. Thesaurus
 2. Dictionary
 3. Novel
 4. Omnibus

Question ID : 65497828932
Status : Not Answered
Chosen Option : --

Comprehension:

In the following passage, some words have been deleted. Read the passage carefully and select the most appropriate option to fill in each blank.

A giant plane carrying 43 passengers was (1) _____ to crash-land when its landing gear got (2) _____. Only the skill of the pilot was able to (3) _____ a major tragedy. Expert mechanics laboured (4) _____ hours before they could find the (5) _____ of the mechanical failure.

SubQuestion No : 21

Q.21 Select the most appropriate option to fill in blank no.1.

- Ans 1. bumped
 2. poked
 3. forced
 4. pushed

Question ID : 65497828943
Status : Not Answered
Chosen Option : --

Comprehension:

In the following passage, some words have been deleted. Read the passage carefully and select the most appropriate option to fill in each blank.

A giant plane carrying 43 passengers was (1) _____ to crash-land when its landing gear got (2) _____. Only the skill of the pilot was able to (3) _____ a major tragedy. Expert mechanics laboured (4) _____ hours before they could find the (5) _____ of the mechanical failure.

SubQuestion No : 22**Q.22 Select the most appropriate option to fill in blank no.2.**

- Ans 1. glued
 2. caught
 3. stuck
 4. fixed

Question ID : 65497828944
Status : Not Answered
Chosen Option : --

Comprehension:

In the following passage, some words have been deleted. Read the passage carefully and select the most appropriate option to fill in each blank.

A giant plane carrying 43 passengers was (1) _____ to crash-land when its landing gear got (2) _____. Only the skill of the pilot was able to (3) _____ a major tragedy. Expert mechanics laboured (4) _____ hours before they could find the (5) _____ of the mechanical failure.

SubQuestion No : 23**Q.23 Select the most appropriate option to fill in blank no.3.**

- Ans 1. forbid
 2. limit
 3. prevent
 4. restrict

Question ID : 65497828945
Status : Not Answered
Chosen Option : --

Comprehension:

In the following passage, some words have been deleted. Read the passage carefully and select the most appropriate option to fill in each blank.

A giant plane carrying 43 passengers was (1) _____ to crash-land when its landing gear got (2) _____. Only the skill of the pilot was able to (3) _____ a major tragedy. Expert mechanics laboured (4) _____ hours before they could find the (5) _____ of the mechanical failure.

SubQuestion No : 24**Q.24 Select the most appropriate option to fill in blank no.4.**

- Ans 1. over
 2. from
 3. at
 4. for

Question ID : 65497828946
Status : Not Answered
Chosen Option : --

Comprehension:

In the following passage, some words have been deleted. Read the passage carefully and select the most appropriate option to fill in each blank.

A giant plane carrying 43 passengers was (1) _____ to crash-land when its landing gear got (2) _____. Only the skill of the pilot was able to (3) _____ a major tragedy. Expert mechanics laboured (4) _____ hours before they could find the (5) _____ of the mechanical failure.

SubQuestion No : 25**Q.25 Select the most appropriate option to fill in blank no.5.**

- Ans 1. plan
 2. motive
 3. agency
 4. cause

Question ID : 65497828947
Status : Not Answered
Chosen Option : --

Section : Part D Hindi

Q.1 रिक्त स्थान को भरने के लिए सबसे उपयुक्त शब्द का चयन करें।

सफलता पाने के लिए कठोर _____ करना पड़ता है।

- Ans 1. श्रम
 2. अध्ययन
 3. अनुशासन
 4. आवागमन

Question ID : 65497828954
Status : Answered
Chosen Option : 1

Q.2 दिए गए वाक्य का वह भाग ज्ञात करें जिसमें कोई त्रुटि है। यदि कोई त्रुटि नहीं है, तो 'कोई त्रुटि नहीं है' चुनें।

कभी-कभी, आकाश में दिखाई देने वाला उल्कापतन एक विलक्षण घटना है।

- Ans 1. दिखाई देने वाला
 2. उल्कापतन एक विलक्षण घटना है।
 3. कभी-कभी, आकाश में
 4. कोई त्रुटि नहीं है।

Question ID : 65497828948
Status : Answered
Chosen Option : 2

Q.3 दिये गये वाक्यांश के लिए एक शब्द दीजिये।

अपने पास रखी हुई, दूसरे की वस्तु

- Ans 1. धरनी
 2. धराऊ
 3. धरोहर
 4. धनज्ञ

Question ID : 65497828953
Status : Answered
Chosen Option : 3

Q.4 'खून का घूँट पीना' मुहावरे का सही अर्थ है-

- Ans 1. घृणा करना
 2. गुस्सा पचा जाना
 3. भयभीत होना
 4. अत्यंत क्रोधित होना

Question ID : 65497828959
Status : Answered
Chosen Option : 2

Q.5 दिये गये वाक्य में रेखांकित अश को प्रतिस्थापित करने के लिए सबसे उपयुक्त विकल्प का चयन करें।

मोहन के गए पर वह उठ बैठा।

- Ans 1. उठने पर
 2. दौड़ने पर
 3. मरने पर
 4. जाने पर

Question ID : 65497828961
Status : Answered
Chosen Option : 4

Q.6 दिए गए शब्द के समानार्थी शब्द का चयन करें।

बाण

- Ans 1. अगम
 2. नाराच
 3. तनय
 4. दहन

Question ID : 65497828952
Status : Answered
Chosen Option : 2

Q.7 'पकज' किसका पर्यायवाची है?

- Ans 1. वस्त्र
 2. किरण
 3. कमल
 4. आँख

Question ID : 65497828965
Status : Answered
Chosen Option : 3

Q.8 दिए गए वाक्य में रेखांकित खंड को प्रतिस्थापित करने के लिए सबसे उपयुक्त विकल्प का चयन करें। यदि इसे प्रतिस्थापित करने की आवश्यकता नहीं है, तो विकल्प 'किसी बदलाव की आवश्यकता नहीं है' का चयन करें।

इस कार्य के विपन्न बन कर तुम आए हो।

- Ans
- 1. किसी बदलाव की आवश्यकता नहीं है।
 - 2. इस कार्य का
 - 3. इस कार्य में
 - 4. इस कार्य की

Question ID : 65497828955
Status : Answered
Chosen Option : 3

Q.9 सही वर्तनी वाले शब्द का चयन करें।

- Ans
- 1. स्थायीत्व
 - 2. स्थायित्व
 - 3. इस्थायित्व
 - 4. स्थाईत्व

Question ID : 65497828956
Status : Answered
Chosen Option : 1

Q.10 दिए गए वाक्य का वह भाग ज्ञात करें जिसमें कोई त्रुटि है। यदि कोई त्रुटि नहीं है, तो 'कोई त्रुटि नहीं है' चुनें।

महेश जी बता रहे थे कि उनका भतीजा अपने लक्ष्य पर नजर रखते हैं।

- Ans
- 1. महेश जी बता रहे थे
 - 2. अपने लक्ष्य पर नजर रखते हैं।
 - 3. कोई त्रुटि नहीं है।
 - 4. कि उनका भतीजा

Question ID : 65497828951
Status : Answered
Chosen Option : 2

Q.11 दिये गये वाक्य में रेखांकित अश को प्रतिस्थापित करने के लिए सबसे उपयुक्त विकल्प का चयन करें।

पृथ्वी का रूप गोल है।

- Ans
- 1. स्वरूप
 - 2. प्रकार
 - 3. आकार
 - 4. प्रारूप

Question ID : 65497828960
Status : Answered
Chosen Option : 3

Q.12 रिक्त स्थान को भरने के लिए सबसे उपयुक्त विकल्प का चयन करें।

शिशु _____ और अबोध होता है।

- Ans 1. अज्ञ
 2. भिन्न
 3. बहुज्ञ
 4. अल्पज्ञ

Question ID : 65497828962
Status : Answered
Chosen Option : 4

Q.13 दिये गये वाक्य के किस भाग में त्रुटि है?

उसने अवाज देकर पूछा।

- Ans 1. पूछा।
 2. देकर
 3. अवाज
 4. उसने

Question ID : 65497828964
Status : Answered
Chosen Option : 2

Q.14 सही वर्तनी वाले शब्द का चयन करें।

- Ans 1. शूर्पणखा
 2. शुपर्णखा
 3. सुपनखा
 4. सूर्पनखा

Question ID : 65497828957
Status : Answered
Chosen Option : 1

Q.15 रिक्त स्थान को भरने के लिए सबसे उपयुक्त विकल्प का चयन करें।

शिक्षक दिवस पर छात्रों ने शिक्षक को पुस्तक _____ की।

- Ans 1. हस्तगत
 2. प्रदान
 3. दान
 4. भेंट

Question ID : 65497828967
Status : Answered
Chosen Option : 4

Q.16 'धन से सबध रखने वाला' वाक्यांश के लिए एक शब्द होगा-

- Ans 1. अर्थशास्त्र
 2. भौतिक
 3. आर्थिक
 4. सपत्तिशास्त्र

Question ID : 65497828966
Status : Answered
Chosen Option : 1

Q.17 'पसीना पसीना होना' मुहाबरे का सही अर्थ है-

- Ans 1. क्रोधित होना
 2. शर्मिंदा होना
 3. प्यासा होना
 4. भयभीत होना

Question ID : 65497828963
Status : Answered
Chosen Option : 4

Q.18 दिये गये वाक्यांश के लिए एक शब्द दीजिये।

खेतों में, मेंड़ों से बनाए गए छोटे-छोटे, वर्गाकार या आयताकार भाग

- Ans 1. नहर
 2. परनाला
 3. क्यारी
 4. नाली

Question ID : 65497828950
Status : Answered
Chosen Option : 3

Q.19 दिए गए शब्द का विलोम चुनें।

जातीय

- Ans 1. विजातीय
 2. अजातीय
 3. प्रजातीय
 4. सजातीय

Question ID : 65497828949
Status : Answered
Chosen Option : 4

Q.20 'कृपण' का विलोम शब्द होगा-

- Ans 1. सरल
 2. कठोर
 3. दाता
 4. कर्मठ

Question ID : 65497828958
Status : Answered
Chosen Option : 3

Comprehension:

दिए गए अनुच्छेद में कुछ शब्द हटा दिए गए हैं। दिए गए विकल्पों की सहायता से रिक्त स्थान भरें। प्रत्येक सख्खा के लिए सबसे उपयुक्त विकल्प का चयन करें-

भारत के गाँव (1) _____ के मनोरम स्थल हैं। वहाँ का निवासी प्रकृति की (2) _____ में ही पल रहा है परन्तु (3) _____ दृष्टि से पिछड़े हुए गाँवों की स्थिति अत्यन्त ही (4) _____ है क्योंकि वहाँ के लोग (5) _____ पर ही निर्भर रहते हैं।

SubQuestion No : 21

Q.21 गद्यांश के रिक्त स्थान (1) के लिए सर्वाधिक उपयुक्त शब्द होगा-

- Ans
- 1. राज्य
 - 2. त्रिलोक
 - 3. प्रकृति
 - 4. शहरो

Question ID : 65497828969

Status : Answered

Chosen Option : 3

Comprehension:

दिए गए अनुच्छेद में कुछ शब्द हटा दिए गए हैं। दिए गए विकल्पों की सहायता से रिक्त स्थान भरें। प्रत्येक सख्खा के लिए सबसे उपयुक्त विकल्प का चयन करें-

भारत के गाँव (1) _____ के मनोरम स्थल हैं। वहाँ का निवासी प्रकृति की (2) _____ में ही पल रहा है परन्तु (3) _____ दृष्टि से पिछड़े हुए गाँवों की स्थिति अत्यन्त ही (4) _____ है क्योंकि वहाँ के लोग (5) _____ पर ही निर्भर रहते हैं।

SubQuestion No : 22

Q.22 गद्यांश के रिक्त स्थान (2) के लिए सर्वाधिक उपयुक्त शब्द होगा-

- Ans
- 1. साथ
 - 2. हाथ
 - 3. छाँव
 - 4. गोद

Question ID : 65497828970

Status : Answered

Chosen Option : 4

Comprehension:

दिए गए अनुच्छेद में कुछ शब्द हटा दिए गए हैं। दिए गए विकल्पों की सहायता से रिक्त स्थान भरें। प्रत्येक सख्खा के लिए सबसे उपयुक्त विकल्प का चयन करें-

भारत के गाँव (1) _____ के मनोरम स्थल हैं। वहाँ का निवासी प्रकृति की (2) _____ में ही पल रहा है परन्तु (3) _____ दृष्टि से पिछड़े हुए गाँवों की स्थिति अत्यन्त ही (4) _____ है क्योंकि वहाँ के लोग (5) _____ पर ही निर्भर रहते हैं।

SubQuestion No : 23

Q.23 गद्यांश के रिक्त स्थान (3) के लिए सर्वाधिक उपयुक्त शब्द होगा-

- Ans
- 1. राजनीतिक
 - 2. आर्थिक
 - 3. शारीरिक
 - 4. मानसिक

Question ID : 65497828971

Status : Answered

Chosen Option : 2

Comprehension:

दिए गए अनुच्छेद में कुछ शब्द हटा दिए गए हैं। दिए गए विकल्पों की सहायता से रिक्त स्थान भरें। प्रत्येक सख्खा के लिए सबसे उपयुक्त विकल्प का चयन करें-

भारत के गाँव (1) _____ के मनोरम स्थल हैं। वहाँ का निवासी प्रकृति की (2) _____ में ही पल रहा है परन्तु (3) _____ दृष्टि से पिछड़े हुए गाँवों की स्थिति अत्यन्त ही (4) _____ है क्योंकि वहाँ के लोग (5) _____ पर ही निर्भर रहते हैं।

SubQuestion No : 24

Q.24 गद्यांश के रिक्त स्थान (4) के लिए सर्वाधिक उपयुक्त शब्द होगा-

- Ans
- 1. कठिन
 - 2. दयनीय
 - 3. स्तरीय
 - 4. सम्पन्न

Question ID : 65497828972

Status : Answered

Chosen Option : 2

Comprehension:

दिए गए अनुच्छेद में कुछ शब्द हटा दिए गए हैं। दिए गए विकल्पों की सहायता से रिक्त स्थान भरें। प्रत्येक सख्खा के लिए सबसे उपयुक्त विकल्प का चयन करें-

भारत के गाँव (1) _____ के मनोरम स्थल हैं। वहाँ का निवासी प्रकृति की (2) _____ में ही पल रहा है परन्तु (3) _____ दृष्टि से पिछड़े हुए गाँवों की स्थिति अत्यन्त ही (4) _____ है क्योंकि वहाँ के लोग (5) _____ पर ही निर्भर रहते हैं।

SubQuestion No : 25

Q.25 गद्यांश के रिक्त स्थान (5) के लिए सर्वाधिक उपयुक्त शब्द होगा-

- Ans
- 1. कृषि
 - 2. प्रकृति
 - 3. सरकार
 - 4. पचायत

Question ID : 65497828973

Status : Answered

Chosen Option : 1