

SSC
GD

Previous Year Paper
17 Nov 2021 Shift 1

Exam Date	17/11/2021
Exam Time :	9:00 AM - 10:30 AM
Subject	Constable GD 2021

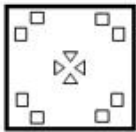
Section : Part A General Intelligence and Reasoning

Q.1 The sequence of folding a piece of paper and the manner in which the folded paper has been cut is shown in the following figures. How would this paper look when unfolded?

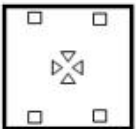


Ans

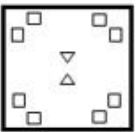
✓ 1.



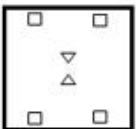
✗ 2.



✗ 3.



✗ 4.



Question ID : 65497831153

Status : Answered

Chosen Option : 1

Q.2 Four letter-clusters have been given, out of which three are alike in some manner and one is different. Select the letter-cluster that is different.

Ans ✗ 1. LOPK

✗ 2. EVIR

✓ 3. CXGV

✗ 4. HSLO

Question ID : 65497831133

Status : Answered

Chosen Option : 3

Q.3 In a certain code language, 'NOTION' is coded as '13127181213'. How will 'BEAUTIFY' be coded in that language?

- Ans 1. 2522266718212
 2. 2505016718212
 3. 2022266818222
 4. 2522268719215

Question ID : 65497831134
Status : Answered
Chosen Option : 1

Q.4 In a certain code language, KILOGRAM is written as LZQFNKHJ. How will AIRCRAFT be written in that language?

- Ans 1. BSHZQEZB
 2. ZHSBQZQH
 3. SEZQBQHZ
 4. SEZQHZBQ

Question ID : 65497831143
Status : Answered
Chosen Option : 3

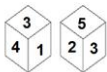
Q.5 Select the option that is related to the third term in the same way as the second term is related to the first term.

METHOD : OIZPYP :: NORMAL : ?

- Ans 1. PSXUKX
 2. PXSUXK
 3. QRYVLY
 4. PSXVLX

Question ID : 65497831142
Status : Answered
Chosen Option : 1

Q.6 Two different positions of the same dice are shown, the six faces of which are numbered from 1 to 6. Select the number that will be on the face opposite to the face having '6'.



- Ans 1. 1
 2. 3
 3. 4
 4. 2

Question ID : 65497831140
Status : Answered
Chosen Option : 1

Q.7 Read the given statements and conclusions carefully. Assuming that the information given in the statements is true, even if it appears to be at variance with commonly known facts, decide which of the given conclusions logically follow(s) from the statements.

Statements:

Some stars are planets.
Some planets are comets.

Conclusions:

I. Some comets are planets.
II. All stars are comets.

- Ans** 1. Only conclusion I follows
 2. Only conclusion II follows
 3. Both conclusions I and II follow
 4. Neither conclusion I nor II follows

Question ID : 65497831150

Status : Answered

Chosen Option : 4

Q.8 Select the figure from among the given options that can replace the question mark (?) in the following series.

S	T	1	S	1	U	?
V	U	V	U	V	S	

Ans

1.

S	2	T
3		1
U		V

2.

T	1	V
		2
S	3	U

3.

T	3	S
		2
V	1	U

4.

T	1	U
		2
S	3	V

Question ID : 65497831148

Status : Answered

Chosen Option : 4

Q.9 Select the number from among the given options that can replace the question mark (?) in the following series.

16, 9, 27, 19, 76, 67, 335, ?

Ans 1. 650

2. 325

3. 415

4. 90

Question ID : 65497831135
Status : Answered
Chosen Option : 4

Q.10 Select the combination of letters that when sequentially placed in the blanks of the given series will complete the series.

P_RQPS_ _P_ _Q_SR_P_RQ

Ans 1. SRQSRPQS

2. SRSQRPQS

3. QRQSRPQS

4. SQQSRPQS

Question ID : 65497831146
Status : Answered
Chosen Option : 1

Q.11 Select the letter-cluster from among the given options that can replace the question mark (?) in the following series.

UC, AE, GG, MI, SK, ?

Ans 1. LM

2. YM

3. YO

4. WN

Question ID : 65497831154
Status : Answered
Chosen Option : 2

Q.12 Select the option that is related to the third number in the same way as the second number is related to the first number and the sixth number is related to the fifth number.

16 : 256 :: 21 : ? :: 19 : 361

Ans 1. 441

2. 324

3. 422

4. 484

Question ID : 65497831138
Status : Answered
Chosen Option : 1

Q.13 आठ मित्र, P, Q, R, S, T, U, V और W, एक गोल मेज़ के परितः इसके केंद्र की ओर अभिमुख होकर बैठे हैं। P, R और S के बीच में है। T, W के बाईं ओर तीसरे स्थान पर है। Q, S के एकदम बाएँ बगल में है। T, S के दाईं ओर तीसरे स्थान पर है। V, U और W के बीच में है। S और W के बीच में कौन बैठा है?

- Ans
- 1. T
 - 2. P
 - 3. Q
 - 4. R

Question ID : 65497831137
Status : Answered
Chosen Option : 3

Q.14 Two years ago, T was twice as old as P. P is thrice as old as R. In five years, P will be 29. What is the present age of T?

- Ans
- 1. 42
 - 2. 48
 - 3. 44
 - 4. 46

Question ID : 65497831152
Status : Answered
Chosen Option : 2

Q.15 Select the correct mirror image of the given combination when the mirror is placed at the right side.

s x g 5 A Y

- Ans
- 1. Y A 5 p x s
 - 2. Y A 5 p x s
 - 3. Y A 5 p x s
 - 4. Y A 9 p x s

Question ID : 65497831136
Status : Answered
Chosen Option : 3

Q.16 राधा और ज्ञानेश की तीन बेटियाँ हैं - मनुजा, तारिणी और सुषमा। तारिणी की शादी जय से हुई है और सुषमा की शादी अभय से हुई है। ज्ञानेश का तीसरा दामाद अखिल है। अखिल के दो बच्चे पीयूष और रानी हैं। जय की दो बेटियाँ ऋचा और नेहा हैं। मृदुल, अभय का इकलौता बेटा है। राधा का रानी से क्या संबंध है?

- Ans
- 1. नानी
 - 2. सास
 - 3. माँ
 - 4. मौसेरी बहन

Question ID : 65497831144
Status : Answered
Chosen Option : 1

Q.17 In a certain code language, 'ABSTRACT' is written as 'IYYVDEU'. How will 'INSTINCT' be written in that language?

- Ans 1. QUYYNPEU
 2. OUYMQEU
 3. OUYYNQEU
 4. QUYPMEU

Question ID : 65497831149
Status : Answered
Chosen Option : 1

Q.18 Select the correct option that indicates the arrangement of the given words in the order in which they appear in an English dictionary.

1. Creditor
2. Creature
3. Credible
4. Creditable
5. Credentials

- Ans 1. 2, 5, 1, 3, 4
 2. 2, 5, 4, 3, 1
 3. 2, 5, 3, 4, 1
 4. 3, 5, 1, 4, 2

Question ID : 65497831145
Status : Answered
Chosen Option : 3

Q.19 Which of the given equations is correctly balanced if 'A' means '+', 'B' means '-', 'C' means 'x', and 'D' means '÷'?

- Ans 1. $66 B 2 D 54 C 18 = 135$
 2. $45 A 5 C 7 D 14 = 77$
 3. $45 D 5 C 7 A 14 = 77$
 4. $66 C 2 B 54 D 18 = 135$

Question ID : 65497831139
Status : Answered
Chosen Option : 3

Q.20 Select the number from among the given options that can replace the question mark (?) in the following series.

240, 258, 278, 300, ?

- Ans 1. 324
 2. 312
 3. 400
 4. 355

Question ID : 65497831147
Status : Answered
Chosen Option : 1

Q.21 Study the given pattern carefully and select the number that can replace the question mark (?) in it.

57 28 29
68 ? 33
72 37 35

- Ans 1. 34
 2. 33
 3. 35
 4. 29

Question ID : 65497831151
Status : Answered
Chosen Option : 2

Q.22 'Complicated' is related to 'Simple' in the same way as 'Shrink' is related to '_____'.
Ans 1. Expand
 2. Execute
 3. Shorten
 4. Narrow

Question ID : 65497831155
Status : Answered
Chosen Option : 1

Q.23 Select the option in which the given figure is embedded (rotation is NOT allowed).

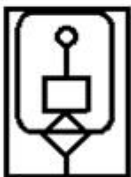


Ans

1.



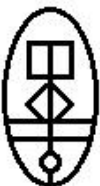
2.



3.



4.



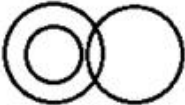
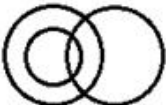


Question ID : 65497831141
Status : Answered
Chosen Option : 3

Q.24 Select the Venn diagram that correctly represents the relationship between the following classes.

Mothers, Fathers, Men

Ans

- ✗ 1. 
- ✓ 2. 
- ✗ 3. 
- ✗ 4. 

Question ID : 65497831157

Status : Answered

Chosen Option : 2

Q.25 छः मित्र A, B, C, D, E और F एक सीधी क्षैतिज पक्ति में उत्तर की ओर मुह करके बैठे हुए हैं। B, F और C के बीच में बैठा है। E, C के दाईं ओर तीसरे स्थान पर बैठा है। D, E के बाईं ओर ठीक बगल में बैठा है। B के दाईं ओर दूसरे स्थान पर कौन बैठा है?

- Ans
- ✗ 1. E
- ✗ 2. F
- ✓ 3. A
- ✗ 4. D

Question ID : 65497831156

Status : Answered

Chosen Option : 4

Section : Part B General Knowledge and General Awareness

Q.1 As per an announcement made by the Chairman of ISRO on 6 September 2021, Chandrayaan-2 had completed _____ revolutions of the Moon.

- Ans
- ✓ 1. 9000
- ✗ 2. 12000
- ✗ 3. 15000
- ✗ 4. 11000

Question ID : 65497831180

Status : Not Answered

Chosen Option : --

Q.2 Which country is regarded as the origin of SUMO Wrestling game?

- Ans 1. Japan
 2. Vietnam
 3. Indonesia
 4. South Korea

Question ID : 65497831161
Status : Answered
Chosen Option : 1

Q.3 Who is known as the 'Father of Microeconomics'?

- Ans 1. Paul Krugman
 2. Milton Friedman
 3. James J Heckman
 4. Alfred Marshall

Question ID : 65497831178
Status : Not Answered
Chosen Option : --

Q.4 The Deputy Speaker of the Lok Sabha is removed from his office by:

- Ans 1. the order of the Vice-President of India
 2. the order of the Comptroller and Auditor-General of India
 3. a resolution of the Lok Sabha passed by a majority of all the then members of the Lok Sabha
 4. the order of the Attorney-General for India

Question ID : 65497831169
Status : Answered
Chosen Option : 3

Q.5 CNG stands for which among the following?

- Ans 1. Cardiac nerve grid
 2. Coal and natural gases
 3. Compressed natural gas
 4. Chemically neutral gene

Question ID : 65497831171
Status : Answered
Chosen Option : 3

Q.6 Till which year was Bangladesh a part of Pakistan?

- Ans 1. 1962
 2. 1974
 3. 1971
 4. 1956

Question ID : 65497831179
Status : Answered
Chosen Option : 3

Q.7 Which of the following was NOT a Mesopotamian language?

- Ans
- 1. Elamite
 - 2. Amorite
 - 3. Akkadian
 - 4. Sumerian

Question ID : 65497831177
Status : Answered
Chosen Option : 4

Q.8 Who among the following was instrumental in declaring Awadh a disturbed region requiring it to be brought under British control?

- Ans
- 1. Lord Wellesley
 - 2. Lord Dalhousie
 - 3. Lord Canning
 - 4. Lord Ripon

Question ID : 65497831173
Status : Answered
Chosen Option : 2

Q.9 How many seats did the Indian National Congress win at the Bihar Assembly Elections held during October-November, 2020?

- Ans
- 1. 22
 - 2. 15
 - 3. 10
 - 4. 19

Question ID : 65497831174
Status : Answered
Chosen Option : 4

Q.10 Which of the following is the SI base unit for photometry — the science of measuring light as perceived by the human visual system?

- Ans
- 1. Ampere
 - 2. Mole
 - 3. Candela
 - 4. Kelvin

Question ID : 65497831165
Status : Answered
Chosen Option : 3

Q.11 In which of the following cities of India is the 'Saptak Music Festival' celebrated?

- Ans
- 1. Ahmedabad
 - 2. Lucknow
 - 3. Bhopal
 - 4. Amritsar

Question ID : 65497831158
Status : Answered
Chosen Option : 4

Q.12 Who is the author of the book 'Two Lives'?

- Ans
- 1. VS Naipaul
 - 2. Arvind Adiga
 - 3. Salman Rusdie
 - 4. V kram Seth

Question ID : 65497831160
Status : Not Answered
Chosen Option : --

Q.13 In August 2021, Prime Minister Narendra Modi announced that the Rajiv Gandhi Khel Ratna Award would be renamed to _____.

- Ans
- 1. Ekalavya Khel Ratna Award
 - 2. Vijay Hazare Khel Ratna Award
 - 3. Dronacharya Khel Ratna Award
 - 4. Major Dhyan Chand Khel Ratna Award

Question ID : 65497831182
Status : Answered
Chosen Option : 4

Q.14 With reference to India's freedom movement, which Prime Minister of Great Britain announced the Communal Award in 1932?

- Ans
- 1. Neville Chamberlain
 - 2. Sir Winston Churchill
 - 3. Stanley Baldwin
 - 4. James Ramsay MacDonald

Question ID : 65497831168
Status : Not Answered
Chosen Option : --

Q.15 In which city did the freedom fighter Chandrashekhra Azad shoot himself on being besieged by the British police?

- Ans
- 1. Jabalpur
 - 2. Kanpur
 - 3. Allahabad
 - 4. Bhopal

Question ID : 65497831167
Status : Not Answered
Chosen Option : --

Q.16 The Kadam dam is located at the confluence of the Kadam river into _____.

- Ans
- 1. Sharavati
 - 2. Godavari
 - 3. Kabini
 - 4. Kaveri

Question ID : 65497831181
Status : Not Answered
Chosen Option : --

Q.17 In November 2020, WhatsApp partnered with five Indian banks to process its payment services. Which of the following banks is NOT one of the five banks in that list?

- Ans
- 1. Axis
 - 2. Bank of India
 - 3. HDFC
 - 4. Jio Payments Bank

Question ID : 65497831175
Status : Answered
Chosen Option : 4

Q.18 According to APEDA report 2020 which Indian state has the highest percentage of commercially cultivated floriculture?

- Ans
- 1. Tamil Nadu
 - 2. Maharashtra
 - 3. Karnataka
 - 4. Madhya Pradesh

Question ID : 65497831159
Status : Answered
Chosen Option : 2

Q.19 When the caterpillar is ready to enter the next stage of its life cycle called _____, it first weaves a net to hold itself.

- Ans
- 1. egg
 - 2. pupa
 - 3. late cocoon
 - 4. early cocoon

Question ID : 65497831164
Status : Answered
Chosen Option : 2

Q.20 India is ranked at the _____ place in the 'Climate Change Performance Index (CCPI) 2021', which was released on 7 December 2020.

- Ans
- 1. 10th
 - 2. 15th
 - 3. 11th
 - 4. 20th

Question ID : 65497831170
Status : Answered
Chosen Option : 1

Q.21 Who among the following was awarded the 2020 Tyler Prize for Environmental Achievement on 27 January 2020?

- Ans
- 1. Partha S Dasgupta
 - 2. Pavan Sukhdev
 - 3. Jyoti Par kh
 - 4. Madhav Gadgil

Question ID : 65497831166
Status : Not Answered
Chosen Option : --

Q.22 In which of the following states is the Yumthang Valley located?

- Ans 1. Uttarakhand
 2. Himachal Pradesh
 3. Nagaland
 4. Sikkim

Question ID : 65497831172
Status : Answered
Chosen Option : 4

Q.23 What is the ratio of money held by public in currency to that they hold in bank deposits called?

- Ans 1. Reserve Deposit Ratio
 2. Cash Reserve Ratio
 3. Currency Deposit Ratio
 4. Statutory Liquidity Ratio

Question ID : 65497831176
Status : Answered
Chosen Option : 4

Q.24 Who among the following dancers is best known for the renaissance of the 'Bharatnatyam' dance form?

- Ans 1. Mallika Sarabhai
 2. Yamini Krishnamurthy
 3. Rukmani Devi Arundale
 4. Alamel Valli

Question ID : 65497831163
Status : Answered
Chosen Option : 2

Q.25 The International Cricket Council (ICC) Board announced a minimum age policy for International cricket in November 2020. As per the policy, a player must be at least _____ to play cricket globally.

- Ans 1. 16 years old
 2. 15 years old
 3. 14 years old
 4. 13 years old

Question ID : 65497831162
Status : Answered
Chosen Option : 3

Q.1

The value of $\frac{33}{40} + \frac{1}{5} \left[\frac{4}{5} - \frac{1}{5} \times \left(\frac{7}{8} - \frac{5}{4} \right) \right] - \frac{4}{5}$ is:

Ans

- 1. $\frac{1}{5}$
- 2. $\frac{1}{4}$
- 3. $\frac{1}{7}$
- 4. $\frac{1}{3}$

Question ID : 65497831195
Status : Answered
Chosen Option : 1

Q.2

The value of $\frac{(251)^2 + (249)^2}{25.1 \times 25.1 - 624.99 + 24.9 \times 24.9}$ is 5×10^k , where the value of k is:

Ans

- 1. 4
- 2. 6
- 3. 3
- 4. 5

Question ID : 65497831192
Status : Answered
Chosen Option : 1

Q.3

A shopkeeper buys a table fan marked at ₹2,600 on 18% discount. He marked it for ₹2,800 and allows a 15% discount. How much does he earn?

Ans

- 1. ₹420
- 2. ₹200
- 3. ₹220
- 4. ₹248

Question ID : 65497831183
Status : Answered
Chosen Option : 4

Q.4

A can do a certain work in 15 days. B is 10% less efficient than A, and C is 20% more efficient than A. All the three work together for 3 days. The remaining work is completed by D alone in $9\frac{1}{2}$ days. D alone can complete the original work in:

Ans

- 1. 18 days
- 2. 15 days
- 3. 25 days
- 4. 20 days

Question ID : 65497831206
Status : Not Answered
Chosen Option : --

Q.5 Pipes A and B can empty a full tank in 15 minutes and 20 minutes, respectively, while pipe C alone can fill the empty tank in 8 minutes. If pipes A, B and C are opened together, then in how many hours will the tank be filled?

- Ans**
- 1. 2.5
 - 2. 1.5
 - 3. 2
 - 4. 3

Question ID : 65497831194
Status : Answered
Chosen Option : 3

Q.6 A factory requires 56 machines to manufacture a given number of articles in 144 days. How many machines will be required to produce the same number of articles in 96 days?

- Ans**
- 1. 63
 - 2. 84
 - 3. 77
 - 4. 81

Question ID : 65497831190
Status : Answered
Chosen Option : 2

Q.7 The average height of 20 students of class 8 is 152 cm and the average height of 15 students of class 9 is 168 cm. What is the average height (to the nearest cm) of the students of both classes?

- Ans**
- 1. 159
 - 2. 160
 - 3. 157
 - 4. 158

Question ID : 65497831189
Status : Answered
Chosen Option : 1

Q.8 A sum of ₹73,500 is divided among A, B, C and D in the ratio 3 : 7 : 9 : 11, respectively. What is the sum of the shares of A and D?

- Ans**
- 1. ₹34,300
 - 2. ₹39,200
 - 3. ₹24,500
 - 4. ₹29,400

Question ID : 65497831184
Status : Answered
Chosen Option : 1

Q.9 Five years ago, the average age of A, B and C was 20 years. Six years ago, the average age of B and C was 9 years. What will be the age (in years) of A 3 years from now?

- Ans
- 1. 41
 - 2. 48
 - 3. 45
 - 4. 47

Question ID : 65497831203
Status : Answered
Chosen Option : 2

Q.10 The difference between the height and the radius of a solid cylinder is 23 cm. The total surface area of the cylinder is 1628 cm^2 . The height and the radius of the cylinder, respectively, are (take $\pi = \frac{22}{7}$):

- Ans
- 1. 33 cm, 10 cm
 - 2. 30 cm, 7 cm
 - 3. 32 cm, 09 cm
 - 4. 28 cm, 5 cm

Question ID : 65497831201
Status : Not Answered
Chosen Option : --

Q.11 The number of years taken for a sum of ₹5,000 to become ₹5,832 at a rate of 16 % per annum compounded half yearly, will be:

- Ans
- 1. 1.5 years
 - 2. $\frac{1}{2}$ year
 - 3. 2 years
 - 4. 1 year

Question ID : 65497831200
Status : Answered
Chosen Option : 4

Q.12 If 25% of x is 40 less than 30% of $(x + 60)$, then 35% of $(x - 40)$ is what percentage more than 120?

- Ans
- 1. $16\frac{2}{3}\%$
 - 2. 20%
 - 3. $12\frac{1}{2}\%$
 - 4. 25%

Question ID : 65497831205
Status : Not Answered
Chosen Option : --

Q.13 What is the least number added to 2483 so that it is completely divisible by 3, 4, 5 and 6?

- Ans**
- 1. 37
 - 2. 23
 - 3. 22
 - 4. 30

Question ID : 65497831197
Status : Answered
Chosen Option : 1

Q.14 How many minutes will Radha take to cover a distance of 1950 m, if she runs at a speed of 26 km/h?

- Ans**
- 1. $7\frac{1}{2}$ minutes
 - 2. $4\frac{1}{2}$ minutes
 - 3. $3\frac{1}{2}$ minutes
 - 4. $5\frac{1}{2}$ minutes

Question ID : 65497831196
Status : Answered
Chosen Option : 2

Q.15 Two numbers are in the ratio 9 : 11. If their HCF is 23, then the difference of the two numbers is:

- Ans**
- 1. 46
 - 2. 146
 - 3. 56
 - 4. 253

Question ID : 65497831188
Status : Answered
Chosen Option : 1

Q.16 A certain sum of money doubles itself in 6 years. How much time (in years) will it take to become five times of itself at the same rate?

- Ans**
- 1. 30
 - 2. 24
 - 3. 35
 - 4. 28

Question ID : 65497831191
Status : Answered
Chosen Option : 1

Q.17 A train can cross a tunnel of length 600 m in 54 seconds, and it can cross a 350 m long bridge in 36 seconds. Which of the following statements is/are correct?

- (i) The speed of the train is 60 km/h.
- (ii) The length of the train is 150 m.

Ans 1. Only statement (ii)

2. Only statement (i)

3. Neither statement (i) nor (ii)

4. Both statements (i) and (ii)

Question ID : 65497831207

Status : Not Answered

Chosen Option : --

Q.18 A man bought two mobiles phones for ₹50,000. He sold one of them at a profit of 15% and the other at a loss of 20%. If the selling price of each mobile is the same, what is the approximate cost price (to the nearest rupee) of the mobile that was sold at a loss?

Ans 1. 27,368

2. 25,465

3. 29,487

4. 20,513

Question ID : 65497831186

Status : Not Answered

Chosen Option : --

Q.19 A man lent out ₹14,000 at 5% and ₹19,000 at 6% simple interest per annum. His total income (in ₹) from the interest in 3 years is:

Ans 1. 3,420

2. 2,100

3. 5,445

4. 5,520

Question ID : 65497831187

Status : Answered

Chosen Option : 4

Q.20 If X is 12.25% more than Y, then Y is approximately _____ less than X.

Ans 1. 3%

2. 10.9%

3. 12%

4. 15.6%

Question ID : 65497831198

Status : Not Answered

Chosen Option : --

Q.21 Raghu bought some pens at the rate of 12 for ₹100 and an equal number of pens at 15 for ₹135. How many pens should he sell for ₹260, so as to make a profit of 20%?

- Ans**
- 1. 20
 - 2. 30
 - 3. 24
 - 4. 25

Question ID : 65497831202
Status : Not Answered
Chosen Option : --

Q.22 A person bought a rectangular piece of land whose length and breadth are in the ratio 7 : 5. If the cost of fencing the land is ₹2,880 at the rate of ₹15/m, then what is the length of the land?

- Ans**
- 1. 56 m
 - 2. 40 m
 - 3. 60 m
 - 4. 84 m

Question ID : 65497831185
Status : Not Answered
Chosen Option : --

Q.23 The ages of two persons P and Q are in the ratio 5 : 7. Eight years ago, the ratio of P and Q was 7 : 13. The present ages of P and Q, respectively, are:

- Ans**
- 1. 15 and 21 years
 - 2. 20 and 28 years
 - 3. 21 and 15 years
 - 4. 12 and 13 years

Question ID : 65497831199
Status : Answered
Chosen Option : 1

Q.24 By selling an article for ₹1800, triple the profit is obtained than the profit that would have been obtained by selling it for ₹1350. The cost price (in ₹) of the article is:

- Ans**
- 1. 1200
 - 2. 1125
 - 3. 1250
 - 4. 1175

Question ID : 65497831193
Status : Answered
Chosen Option : 1

Q.25 The marked price of an article is ₹550. It is sold for ₹317.90, after giving three successive discounts of 15%, $x\%$ and 20% on its marked price. If it is sold by giving a single discount of $2x\%$, then its selling price (in ₹) will be:

- Ans
- 1. 440
 - 2. 385
 - 3. 495
 - 4. 484

Question ID : 65497831204
Status : Not Answered
Chosen Option : --

Section : Part D English

Q.1 The following sentence has been split into four segments. Identify the segment that contains a grammatical error.

The report said that / people who are eat meat / are at a higher risk / of fractures.

- Ans
- 1. are at a higher risk
 - 2. people who are eat meat
 - 3. of fractures
 - 4. The report said that

Question ID : 65497831214
Status : Answered
Chosen Option : 2

Q.2 Select the most appropriate synonym of the given word.

Imperial

- Ans
- 1. Paternal
 - 2. Sovereign
 - 3. God-fearing
 - 4. Ancestral

Question ID : 65497831223
Status : Answered
Chosen Option : 4

Q.3 Parts of the given sentence have been given as options. One of them contains a grammatical error. Select the option that has the error.

I am sure that Vasu is not going to returned the money that he owes you.

- Ans
- 1. returned
 - 2. I am sure
 - 3. he owes you
 - 4. not going to

Question ID : 65497831222
Status : Answered
Chosen Option : 1

Q.4 Select the correctly spelt word.

- Ans 1. Continuosly
 2. Contenuously
 3. Continuously
 4. Contenewosly

Question ID : 65497831211
Status : Answered
Chosen Option : 1

Q.5 Select the most appropriate option to fill in the blank.

From these findings, we can _____ that the rate of crime is increasing in the city.

- Ans 1. presuppose
 2. infer
 3. summarise
 4. presume

Question ID : 65497831225
Status : Answered
Chosen Option : 4

Q.6 Select the most appropriate meaning of the given idiom.

Down in the dumps

- Ans 1. In a high spirit
 2. In a depressed state of mind
 3. In a state of fury
 4. In a very happy mood

Question ID : 65497831221
Status : Answered
Chosen Option : 2

Q.7 Select the most appropriate synonym of the given word.

Monotonous

- Ans 1. Modified
 2. Varied
 3. Boring
 4. Fluctuated

Question ID : 65497831216
Status : Answered
Chosen Option : 3

Q.8 The following sentence has been split into four segments. Identify the segment that contains a grammatical error.

Angad says that / he follows / his exercise regimen strictly / and that helping to him stay fit.

- Ans
- 1. his exercise regimen strictly
 - 2. Angad says that
 - 3. he follows
 - 4. and that helping to him stay fit

Question ID : 65497831215
Status : Answered
Chosen Option : 4

Q.9 Select the option that can be used as a one-word substitute for the given group of words.

Delay an event to a later date or time

- Ans
- 1. Postpone
 - 2. Prepone
 - 3. Preserve
 - 4. Persevere

Question ID : 65497831220
Status : Answered
Chosen Option : 1

Q.10 Select the most appropriate option to fill in the blank.

The shops at the Indian airports have to _____ prices in Indian rupees.

- Ans
- 1. display
 - 2. convert
 - 3. trace
 - 4. tag

Question ID : 65497831208
Status : Answered
Chosen Option : 1

Q.11 Select the most appropriate option that can substitute the underlined segment in the given sentence. If there is no need to substitute it, select 'No substitution required'.

If she likes the scenery, she will paint it.

- Ans
- 1. No substitution required
 - 2. If she like
 - 3. If she had liked
 - 4. If she is liking

Question ID : 65497831209
Status : Answered
Chosen Option : 1

Q.12 Select the most appropriate option to fill in the blank.

Besides having a good academic record, it is important that you learn how to face an interview with _____ and self-confidence.

- Ans
- 1. counsel
 - 2. ease
 - 3. experience
 - 4. adaptation

Question ID : 65497831212
Status : Answered
Chosen Option : 2

Q.13 Select the most appropriate option that can substitute the underlined word in the given sentence.

He became the first Indian to be invited to perform at the advantageous Maple Theatre in Canada.

- Ans
- 1. prestigious
 - 2. inauspicious
 - 3. heterogeneous
 - 4. multifarious

Question ID : 65497831213
Status : Answered
Chosen Option : 1

Q.14 Select the most appropriate ANTONYM of the given word.

Enthusiasm

- Ans
- 1. Excitement
 - 2. Lethargy
 - 3. Passion
 - 4. Devotion

Question ID : 65497831226
Status : Answered
Chosen Option : 2

Q.15 Select the most appropriate meaning of the given idiom.

To get out of hand

- Ans
- 1. To lose courage
 - 2. To act irresponsibly
 - 3. To become uncontrollable
 - 4. To be indecisive

Question ID : 65497831210
Status : Answered
Chosen Option : 3

Q.16 Select the option that will improve the underlined part of the given sentence. In case no improvement is needed, select 'No improvement required'.

I have never see anything like this before.

- Ans
- 1. never saw anything
 - 2. never seen anything
 - 3. never saw something
 - 4. No improvement required

Question ID : 65497831227
Status : Answered
Chosen Option : 2

Q.17 Select the INCORRECTLY spelt word.

- Ans
- 1. Sensible
 - 2. Campatable
 - 3. Accessible
 - 4. Feasible

Question ID : 65497831219
Status : Answered
Chosen Option : 2

Q.18 Select the option that can be used as a one-word substitute for the given group of words.

An outgoing, socially confident person

- Ans
- 1. Extrovert
 - 2. Introvert
 - 3. Brooder
 - 4. Solitary

Question ID : 65497831224
Status : Answered
Chosen Option : 1

Q.19 Select the most appropriate ANTONYM of the given word.

Deny

- Ans
- 1. Block
 - 2. Prevent
 - 3. Accept
 - 4. Check

Question ID : 65497831217
Status : Answered
Chosen Option : 3

Q.20 Select the option that can be used as a one-word substitute for the given group of words.

A study of the human body

- Ans 1. Philanthropy
 2. Pathology
 3. Physiology
 4. Philology

Question ID : 65497831218
Status : Answered
Chosen Option : 3

Comprehension:

In the following passage, some words have been deleted. Read the passage carefully and select the most appropriate option to fill in each blank.

Few people lived near the North Pole. A small Inuit community had settled the closest, (1) _____ for the most part the region remained isolated (2) _____ the rest of the world for centuries. A few (3) _____ explorers like Henry Hudson and James Cook (4) _____ to navigate the region in search of a sea (5) _____ to connect the Atlantic and Pacific Oceans in the waters above North America.

SubQuestion No : 21

Q.21 Select the most appropriate option to fill in blank no. 1.

- Ans 1. so
 2. because
 3. or
 4. but

Question ID : 65497831229
Status : Answered
Chosen Option : 4

Comprehension:

In the following passage, some words have been deleted. Read the passage carefully and select the most appropriate option to fill in each blank.

Few people lived near the North Pole. A small Inuit community had settled the closest, (1) _____ for the most part the region remained isolated (2) _____ the rest of the world for centuries. A few (3) _____ explorers like Henry Hudson and James Cook (4) _____ to navigate the region in search of a sea (5) _____ to connect the Atlantic and Pacific Oceans in the waters above North America.

SubQuestion No : 22

Q.22 Select the most appropriate option to fill in blank no. 2.

- Ans 1. by
 2. with
 3. of
 4. from

Question ID : 65497831230
Status : Answered
Chosen Option : 4

Comprehension:

In the following passage, some words have been deleted. Read the passage carefully and select the most appropriate option to fill in each blank.

Few people lived near the North Pole. A small Inuit community had settled the closest, (1) _____ for the most part the region remained isolated (2) _____ the rest of the world for centuries. A few (3) _____ explorers like Henry Hudson and James Cook (4) _____ to navigate the region in search of a sea (5) _____ to connect the Atlantic and Pacific Oceans in the waters above North America.

SubQuestion No : 23

Q.23 Select the most appropriate option to fill in blank no. 3.

- Ans 1. strong
 2. powerful
 3. daring
 4. thoughtful

Question ID : 65497831231

Status : Answered

Chosen Option : 3

Comprehension:

In the following passage, some words have been deleted. Read the passage carefully and select the most appropriate option to fill in each blank.

Few people lived near the North Pole. A small Inuit community had settled the closest, (1) _____ for the most part the region remained isolated (2) _____ the rest of the world for centuries. A few (3) _____ explorers like Henry Hudson and James Cook (4) _____ to navigate the region in search of a sea (5) _____ to connect the Atlantic and Pacific Oceans in the waters above North America.

SubQuestion No : 24

Q.24 Select the most appropriate option to fill in blank no. 4.

- Ans 1. tried
 2. trying
 3. try
 4. had tried

Question ID : 65497831232

Status : Answered

Chosen Option : 4

Comprehension:

In the following passage, some words have been deleted. Read the passage carefully and select the most appropriate option to fill in each blank.

Few people lived near the North Pole. A small Inuit community had settled the closest, (1) _____ for the most part the region remained isolated (2) _____ the rest of the world for centuries. A few (3) _____ explorers like Henry Hudson and James Cook (4) _____ to navigate the region in search of a sea (5) _____ to connect the Atlantic and Pacific Oceans in the waters above North America.

SubQuestion No : 25

Q.25 Select the most appropriate option to fill in blank no. 5.

- Ans 1. track
 2. route
 3. path
 4. road

Question ID : 65497831233

Status : Answered

Chosen Option : 2

Q.1 निम्नलिखित में से अशुद्ध वर्तनी वाले शब्द को पहचानिए-

- Ans 1. दशहरा
 2. डारधिची
 3. ताज्जुब
 4. ज्योतिषी

Question ID : 65497831238
Status : Not Answered
Chosen Option : --

Q.2 'ठीक परिणाम देने वाला' वाक्यांश के लिए उपयुक्त शब्द होगा-

- Ans 1. सुखदायी
 2. फलदायी
 3. सुखात
 4. फलक

Question ID : 65497831253
Status : Not Answered
Chosen Option : --

Q.3 रिक्त स्थान की पूर्ति के लिए सबसे उपयुक्त शब्द का चयन करें।

आज इस साल का पहला तूफान _____।

- Ans 1. आया
 2. चला
 3. नाचा
 4. उठा

Question ID : 65497831247
Status : Not Answered
Chosen Option : --

Q.4 'काँटो पर लोटना' इस मुहावरे का उचित अर्थ किस विकल्प में है?

- Ans 1. बाधा दूर होना
 2. बेचैन होना
 3. अडचनें पैदा करना
 4. सकट में डालना

Question ID : 65497831235
Status : Not Answered
Chosen Option : --

Q.5 रिक्त स्थान की पूर्ति के लिए सबसे उपयुक्त शब्द का चयन करें।

इस _____ घर-घर में यही दशा है।

- Ans 1. गाव तक
 2. गाव के
 3. गाव की
 4. गाव में

Question ID : 65497831246
Status : Not Answered
Chosen Option : --

Q.6 उस विकल्प का चयन कीजिए जो नीचे दिए गये मुहावरे का अर्थ व्यक्त करता है-

आपे में आना

- Ans
- 1. बेहोश हो जाना
 - 2. बहुत गुस्से में आना
 - 3. होश में आना
 - 4. काबू में न रहना

Question ID : 65497831244
Status : Not Answered
Chosen Option : --

Q.7 दिए गए शब्द के विलोम शब्द का चयन करें।

आसक्त

- Ans
- 1. सक्त
 - 2. विरक्त
 - 3. विस्तृत
 - 4. अनासक्त

Question ID : 65497831241
Status : Not Answered
Chosen Option : --

Q.8 दिए गए वाक्य में रेखांकित खंड को प्रतिस्थापित करने के लिए सबसे उपयुक्त विकल्प का चयन करें।
यदि इसे प्रतिस्थापित करने की आवश्यकता नहीं है, तो विकल्प 'किसी बदलाव की आवश्यकता नहीं है'
का चयन करें।

जनता के अंदर असतोष फैल गया।

- Ans
- 1. के पास
 - 2. किसी बदलाव की आवश्यकता नहीं है।
 - 3. जनता में
 - 4. के भीतर

Question ID : 65497831234
Status : Not Answered
Chosen Option : --

Q.9 दिए गए वाक्य का वह भाग ज्ञात करें जिसमें कोई त्रुटि है। यदि कोई त्रुटि नहीं है, तो 'कोई त्रुटि नहीं है'
विकल्प को चुनें।

शिक्षक ने उन छात्रों को पूछा।

- Ans
- 1. पूछा
 - 2. कोई त्रुटि नहीं है
 - 3. उन छात्रों को
 - 4. शिक्षक ने

Question ID : 65497831240
Status : Not Answered
Chosen Option : --

Q.10 जिसके दस आनन है - वाक्याश के लिए एक शब्द लिखिए।

- Ans
- 1. राम
 - 2. कबीर
 - 3. दशानन
 - 4. कवि दिनकर

Question ID : 65497831242
Status : Not Answered
Chosen Option : --

Q.11 दिए गये वाक्याश के लिए एक शब्द दीजिये-

बिना वेतन के काम करने वाला

- Ans
- 1. अवैतनिक
 - 2. वैतनिक
 - 3. भुगतानविहीन
 - 4. अपेय

Question ID : 65497831245
Status : Not Answered
Chosen Option : --

Q.12 निम्नलिखित में से शुद्ध वर्तनी वाले शब्द को पहचानिए-

- Ans
- 1. बिकारी
 - 2. ओषधी
 - 3. सच्च
 - 4. कारीगर

Question ID : 65497831239
Status : Not Answered
Chosen Option : --

Q.13 दिए गए शब्द के समानार्थी का चयन करें।

कोयल

- Ans
- 1. मुरारी
 - 2. वसतदूत
 - 3. श्वान
 - 4. अनग

Question ID : 65497831237
Status : Not Answered
Chosen Option : --

Q.14 दिये गये वाक्य के किस भाग में त्रुटि है?

पिताजी मेरे परीक्षाफल से सतुष्ट नहीं हुए।

- Ans
- 1. सतुष्ट
 - 2. परीक्षाफल से
 - 3. नहीं हुए।
 - 4. पिताजी मेरे

Question ID : 65497831250
Status : Not Answered
Chosen Option : --

Q.15 दिये गये वाक्य में रेखांकित अश को प्रतिस्थापित करने के लिए सबसे उपयुक्त विकल्प का चयन करें।

कर्मचारी अपना वेतन नहीं पा पाया।

- Ans
- 1. दे पाया।
 - 2. भर पाया।
 - 3. कर पाया।
 - 4. ले पाया।

Question ID : 65497831252
Status : Not Answered
Chosen Option : --

Q.16 दिए गए वाक्य में रेखांकित खड को प्रतिस्थापित करने के लिए सबसे उपयुक्त विकल्प का चयन करें।
यदि इसे प्रतिस्थापित करने की आवश्यकता नहीं है, तो विकल्प 'किसी बदलाव की आवश्यकता नहीं है'
का चयन करें।

मैं गाने का कसरत कर रहा हूँ।

- Ans
- 1. समर्पण कर रहा हूँ
 - 2. व्यायाम कर रहा हूँ
 - 3. किसी बदलाव की आवश्यकता नहीं है।
 - 4. अभ्यास कर रहा हूँ

Question ID : 65497831249
Status : Not Answered
Chosen Option : --

Q.17 रिक्त स्थान की पूर्ति के लिए सबसे उपयुक्त शब्द का चयन करें।

बारिश की बूदें _____ रही हैं।

- Ans
- 1. टपक
 - 2. रिस
 - 3. बरस
 - 4. गीर

Question ID : 65497831248
Status : Not Answered
Chosen Option : --

Q.18 दिए गए वाक्य का वह भाग ज्ञात करें जिसमें कोई त्रुटि है। यदि कोई त्रुटि नहीं है, तो 'कोई त्रुटि नहीं है'
विकल्प को चुनें।

रमादेवी एक विद्वान महिला थीं।

- Ans
- 1. एक विद्वान
 - 2. रमादेवी
 - 3. कोई त्रुटि नहीं है
 - 4. महिला थी

Question ID : 65497831236
Status : Not Answered
Chosen Option : --

Q.19 दिए गए शब्द के विलोम शब्द का चयन करें-

स्वल्पायु

- Ans 1. चिरायु
 2. अल्पायु
 3. अवस्था
 4. दीर्घ

Question ID : 65497831243
Status : Not Answered
Chosen Option : --

Q.20 'नलिन' किसका पर्यायवाची है?

- Ans 1. जल
 2. कमल
 3. स्वर्ग
 4. कपड़ा

Question ID : 65497831251
Status : Not Answered
Chosen Option : --

Comprehension:

नीचे दिए गए गद्यांश में से कुछ शब्द हटा दिए गए हैं। संबंधित प्रश्नों में प्रत्येक सख्खा के लिए सबसे उपयुक्त विकल्प का चयन करें।

(1) _____ को सबल बनाने के लिए हमें नियमित (2) _____ करना चाहिए। सुदूर (3) _____ के लिए हमें खेलना, दौड़ना, चलना, कूदना और (4) _____ चाहिए। अतएव हम सभी को विद्यालयों में होनेवाले (5) _____ में भाग लेना चाहिए।

SubQuestion No : 21

Q.21 गद्यांश के रिक्त स्थान (1) के लिए सर्वाधिक उपयुक्त शब्द होगा-

- Ans 1. काम
 2. शरीर
 3. परिवार
 4. हृदय

Question ID : 65497831255
Status : Not Answered
Chosen Option : --

Comprehension:

नीचे दिए गए गद्यांश में से कुछ शब्द हटा दिए गए हैं। संबंधित प्रश्नों में प्रत्येक सख्खा के लिए सबसे उपयुक्त विकल्प का चयन करें।

(1) _____ को सबल बनाने के लिए हमें नियमित (2) _____ करना चाहिए। सुदूर (3) _____ के लिए हमें खेलना, दौड़ना, चलना, कूदना और (4) _____ चाहिए। अतएव हम सभी को विद्यालयों में होनेवाले (5) _____ में भाग लेना चाहिए।

SubQuestion No : 22

Q.22 गद्यांश के रिक्त स्थान (2) के लिए सर्वाधिक उपयुक्त शब्द होगा-

- Ans 1. भाषण करना
 2. शोना
 3. खाना
 4. व्यायाम

Question ID : 65497831256
Status : Not Answered
Chosen Option : --

Comprehension:

नीचे दिए गए गद्यांश में से कुछ शब्द हटा दिए गए हैं। संबंधित प्रश्नों में प्रत्येक सख्खा के लिए सबसे उपयुक्त विकल्प का चयन करें।

(1) _____ को सबल बनाने के लिए हमें नियमित (2) _____ करना चाहिए। सुदूर (3) _____ के लिए हमें खेलना, दौड़ना, चलना, कूदना और (4) _____ चाहिए। अतएव हम सभी को विद्यालयों में होनेवाले (5) _____ में भाग लेना चाहिए।

SubQuestion No : 23

Q.23 गद्यांश के रिक्त स्थान (3) के लिए सर्वाधिक उपयुक्त शब्द होगा-

- Ans
- 1. कार्य
 - 2. व्यवहार
 - 3. स्वास्थ्य
 - 4. वेश-भूषा

Question ID : 65497831257

Status : Not Answered

Chosen Option : --

Comprehension:

नीचे दिए गए गद्यांश में से कुछ शब्द हटा दिए गए हैं। संबंधित प्रश्नों में प्रत्येक सख्खा के लिए सबसे उपयुक्त विकल्प का चयन करें।

(1) _____ को सबल बनाने के लिए हमें नियमित (2) _____ करना चाहिए। सुदूर (3) _____ के लिए हमें खेलना, दौड़ना, चलना, कूदना और (4) _____ चाहिए। अतएव हम सभी को विद्यालयों में होनेवाले (5) _____ में भाग लेना चाहिए।

SubQuestion No : 24

Q.24 गद्यांश के रिक्त स्थान (4) के लिए सर्वाधिक उपयुक्त शब्द होगा-

- Ans
- 1. पढ़ना
 - 2. टहलना
 - 3. गीत गाना
 - 4. रोना

Question ID : 65497831258

Status : Not Answered

Chosen Option : --

Comprehension:

नीचे दिए गए गद्यांश में से कुछ शब्द हटा दिए गए हैं। संबंधित प्रश्नों में प्रत्येक सख्खा के लिए सबसे उपयुक्त विकल्प का चयन करें।

(1) _____ को सबल बनाने के लिए हमें नियमित (2) _____ करना चाहिए। सुदूर (3) _____ के लिए हमें खेलना, दौड़ना, चलना, कूदना और (4) _____ चाहिए। अतएव हम सभी को विद्यालयों में होनेवाले (5) _____ में भाग लेना चाहिए।

SubQuestion No : 25

Q.25 गद्यांश के रिक्त स्थान (5) के लिए सर्वाधिक उपयुक्त शब्द होगा-

- Ans
- 1. बातचीत में
 - 2. कसरत
 - 3. खेलों
 - 4. मजाक

Question ID : 65497831259

Status : Not Answered

Chosen Option : --

**SSC
GD**

Previous Year Paper
17 Nov 2021 Shift 2

Exam Date	17/11/2021
Exam Time :	12:30 PM - 2:00 PM
Subject	Constable GD 2021

Section : Part A General Intelligence and Reasoning

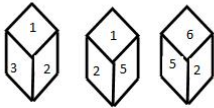
Q.1 Which two signs need to be interchanged to make the following equation correct?

$$16 \div 32 \times 128 + 9 - 17 = - 4$$

- Ans
- 1. \times and $-$
 - 2. $+$ and $+$
 - 3. \times and $+$
 - 4. $+$ and $-$

Question ID : 65497830258
 Status : Answered
 Chosen Option : 3

Q.2 Three different positions of the same dice are shown. Select the number that will be on the face opposite to the one having '4'.



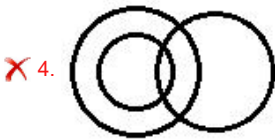
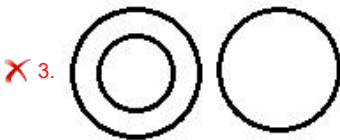
- Ans
- 1. 6
 - 2. 2
 - 3. 1
 - 4. 3

Question ID : 65497830259
 Status : Answered
 Chosen Option : 2

Q.3 Select the Venn diagram that best represents the relationship between the following classes.

Mammals, Zebra, Animals

Ans



Question ID : 65497830264

Status : Answered

Chosen Option : 1

Q.4 In a certain code language, 'SINGER' is written as 'TKROUX'. How will 'ROOKIE' be written in that language?

Ans

✗ 1. SQSRYK

✗ 2. SQRSYK

✗ 3. SQRRYK

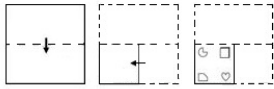
✓ 4. SQSSYK

Question ID : 65497830249

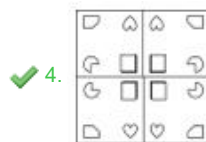
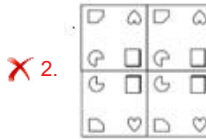
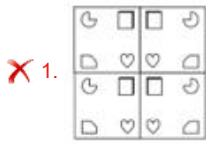
Status : Answered

Chosen Option : 4

Q.5 The sequence of folding a piece of paper and the manner in which the folded paper has been cut is shown in the following figures. How would this paper look when unfolded?



Ans



Question ID : 65497830255
 Status : Answered
 Chosen Option : 4

Q.6 Study the given pattern carefully and select the number that can replace the question mark (?) in it.

81 33 56

3 6 4

54 11 ?

Ans 1. 9

2. 28

3. 27

4. 14

Question ID : 65497830253
 Status : Answered
 Chosen Option : 2

Q.7 C is the brother of B and D is the grandfather of E. B is the daughter-in-law of D and A is the father of E. How is C related to E?

Ans 1. Paternal Aunt

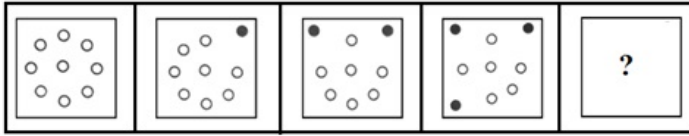
2. Maternal aunt

3. Maternal uncle

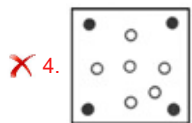
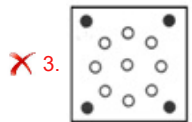

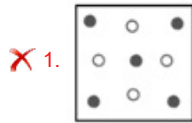
4. Paternal Uncle

Question ID : 65497830250
 Status : Answered
 Chosen Option : 3

Q.8 Which figure will replace the question mark (?) in the following figure series?



Ans



Question ID : 65497830247
Status : Answered
Chosen Option : 2

Q.9 Select the option that is related to the third number in the same way as the second number is related to the first number.

77 : 11 :: 259 : ?

- Ans 1. 31
 2. 43
 3. 29
 4. 37

Question ID : 65497830257
Status : Answered
Chosen Option : 4

Q.10 Select the letter-cluster from among the given options that can replace the question mark (?) in the following series.

BKR, DNV, FQZ, ?, JWH

- Ans 1. HSC
 2. THE
 3. HUD
 4. HTD

Question ID : 65497830261
Status : Answered
Chosen Option : 4

Q.11 A number is subtracted from 4 times of it and then, the number obtained is added to its (the resultant's) next number. If this gives the answer as 91, what was the original number?

- Ans
- 1. 17
 - 2. 13
 - 3. 14
 - 4. 15

Question ID : 65497830254
Status : Answered
Chosen Option : 4

Q.12 Select the number from among the given options that can replace the question mark (?) in the following series.

15, 45, 75, 105, ?

- Ans
- 1. 120
 - 2. 135
 - 3. 125
 - 4. 130

Question ID : 65497830246
Status : Answered
Chosen Option : 2

Q.13 In a certain code language, 'DESK' is coded as '@#+% ' and 'RAIN' is coded as '\$-x*'. How will 'RISK' be coded in that language?

- Ans
- 1. \$x+%
 - 2. +-%
 - 3. #+%@
 - 4. S#%x

Question ID : 65497830251
Status : Answered
Chosen Option : 1

Q.14 Twelve friends are sitting in two parallel lines. There are 6 people sitting in each row and facing a person of the other row. In row 1, A, B, C, D, E and F are seated and all of them are facing north. In row 2, O, P, Q, R, S and T are seated and all of them are facing south but not necessarily in the same order. C, is third to the right of B. C is not an immediate neighbour to either E or A. P is third to the left of S. Neither P nor S are sitting at the extreme ends of any row. F, faces O, who is second to the right of T, and T is not an immediate neighbour to S. Only two people are sitting between Q and T. A, is not facing R. Which of the following pairs are sitting at the extreme ends?

- Ans
- 1. SB, PC
 - 2. RB, TC
 - 3. RE, TC
 - 4. SA, PD

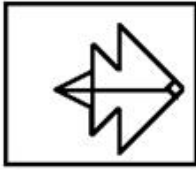
Question ID : 65497830256
Status : Answered
Chosen Option : 3

Q.15 Select the option in which the given figure is embedded (rotation is NOT allowed).



Ans

✗ 1.



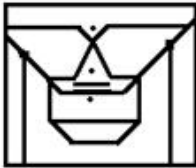
✓ 2.



✗ 3.



✗ 4.



Question ID : 65497830260

Status : Answered

Chosen Option : 2

Q.16 In a certain code language, COACH is coded as 90, and POST is coded as 210. How will NOISE be coded in that language?

Ans ✗ 1. 158

✗ 2. 124

✗ 3. 168

✓ 4. 186

Question ID : 65497830266

Status : Answered

Chosen Option : 4

Q.17 Read the given statements and conclusions carefully. Assuming that the information given in the statements is true, even if it appears to be at variance with commonly known facts, decide which of the given conclusions logically follow(s) from the statements.

Statements:

All M. Tech students are engineers.

All LLM students are lawyers.

Conclusions:

I. All lawyers are LLM students.

II. All engineers are M. Tech students.

- Ans**
- 1. Both conclusions I and II follow.
 - 2. Only conclusion II follows.
 - 3. Only conclusion I follows.
 - 4. Neither conclusion I nor II follows.

Question ID : 65497830252

Status : Answered

Chosen Option : 4

Q.18 'Nephrologist' is related to 'Kidney' in the same way as 'Cardiologist' is related to _____.

- Ans**
- 1. Pancreas
 - 2. Lungs
 - 3. Heart
 - 4. Gall bladder

Question ID : 65497830262

Status : Answered

Chosen Option : 3

Q.19 Select the number from among the given options that can replace the question mark (?) in the following series.

14, 33, 71, 147, 299, ?

- Ans**
- 1. 612
 - 2. 493
 - 3. 593
 - 4. 603

Question ID : 65497830267

Status : Answered

Chosen Option : 4

Q.20 Neeta, Vinita, Satya, Kamini, Divya and Alpa are sitting around a circular table facing the centre of the table. Alpa is to the immediate right of Vinita. Kamini is between Neeta and Satya. Divya is between Neeta and Vinita. Who is sitting third to the left of Satya?

- Ans**
- 1. Divya
 - 2. Neeta
 - 3. Vinita
 - 4. Alpa

Question ID : 65497830263

Status : Answered

Chosen Option : 1

Q.21 Four letter-clusters have been given, out of which three are alike in some manner and one is different. Select the letter-cluster that is different.

- Ans
- 1. DGJMP
 - 2. TWZCF
 - 3. PSVYB
 - 4. NQTWA

Question ID : 65497830265
Status : Answered
Chosen Option : 4

Q.22 Select the option that is related to the third letter-cluster in the same way as the second letter-cluster is related to the first letter-cluster.

RKM : VFS :: PSQ : ?

- Ans
- 1. SNW
 - 2. TMW
 - 3. TNW
 - 4. SNX

Question ID : 65497830248
Status : Answered
Chosen Option : 3

Q.23 Select the combination of letters that when sequentially placed in the blanks of the given series will complete the series.

G _ _ P K _ D F _ K G D _ _ K

- Ans
- 1. DFGDFP
 - 2. DPDFKF
 - 3. DFGPPF
 - 4. DFGDFK

Question ID : 65497830245
Status : Answered
Chosen Option : 3

Q.24 Select the correct mirror image of the given combination when the mirror is placed to its right side.

FR4PW5

- Ans
- 1. ƆWƆP4RƆ
 - 2. ƆWƆP4RƆ
 - 3. ƆWƆP4RƆ
 - 4. 5WƆP4RƆ

Question ID : 65497830268
Status : Answered
Chosen Option : 1

Q.25 Select the correct option that indicates the arrangement of the given words in the order in which they appear in an English dictionary.

1. Uneventful
2. Uneconomical
3. Unexplained
4. Unexpected
5. Unemployment

- Ans
- 1. 2, 5, 3, 4, 1
 - 2. 2, 5, 1, 3, 4
 - 3. 2, 5, 1, 4, 3
 - 4. 3, 5, 1, 4, 2

Question ID : 65497830244
Status : Answered
Chosen Option : 3

Section : Part B General Knowledge and General Awareness

Q.1 Politician-writer M Veerappa Moily was awarded the Sahitya Akademi Award 2020 for his poetry titled 'Sri Bahubali Ahimsadigvijayam' in _____.

- Ans
- 1. Tamil
 - 2. Telugu
 - 3. Kannada
 - 4. Malayalam

Question ID : 65497830289
Status : Not Answered
Chosen Option : --

Q.2 Which of the following diseases is caused by the deficiency of haemoglobin?

- Ans
- 1. Malaria
 - 2. Anemia
 - 3. Rabies
 - 4. Cholera

Question ID : 65497830270
Status : Answered
Chosen Option : 2

Q.3 Which of the following taxes was introduced in India to achieve the goal of 'One Nation, One Tax, One Market'?

- Ans
- 1. Goods and Services Tax
 - 2. Union Excise Duty
 - 3. Custom Duty
 - 4. Security Transaction Tax

Question ID : 65497830293
Status : Answered
Chosen Option : 1

Q.4 Which of the following awards did Virat Kohli win in December 2020?

- Ans
- 1. ICC Men's Test Cricketer of the Decade
 - 2. ICC Men's T20 Cricketer of the Decade
 - 3. ICC Men's ODI Cricketer of the Decade
 - 4. ICC Spirit of Cricket Award of the Decade

Question ID : 65497830292
Status : Answered
Chosen Option : 3

Q.5 When did the Hindu Succession Act abandon the rule of primogeniture in India?

- Ans
- 1. 1956
 - 2. 1950
 - 3. 1946
 - 4. 1960

Question ID : 65497830280
Status : Answered
Chosen Option : 1

Q.6 Which of the following statements is INCORRECT?

- Ans
- 1. Food from the stomach passes into the small intestine.
 - 2. Complete digestion of carbohydrates, proteins and fats takes place in the small intestine.
 - 3. Saliva contains an enzyme called salivary lipase that breaks down starch into simple sugar.
 - 4. Food enters the stomach through the oesophagus (esophagus).

Question ID : 65497830282
Status : Answered
Chosen Option : 1

Q.7 Which of the following parts of the human body contains gustatory receptors?

- Ans
- 1. Eyes
 - 2. Nose
 - 3. Tongue
 - 4. Skin

Question ID : 65497830283
Status : Answered
Chosen Option : 2

Q.8 Farmers in some parts of India celebrate the Pola festival by worshipping their _____.

- Ans
- 1. farm tools
 - 2. ancestors
 - 3. farms
 - 4. bullocks

Question ID : 65497830281
Status : Not Answered
Chosen Option : --

Q.9 Who among the following laid the foundation of independent Awadh dynasty?

- Ans
- 1. Chin Qilich Khan
 - 2. Marthanda Varma
 - 3. Saadat Khan
 - 4. Haider Ali

Question ID : 65497830276
Status : Answered
Chosen Option : 4

Q.10 Which among the following is the longest river in the Thar Desert?

- Ans
- 1. Jhelum
 - 2. Chambal
 - 3. Son
 - 4. Luni

Question ID : 65497830288
Status : Answered
Chosen Option : 4

Q.11 The '_____' is an initiative of the National Bamboo Mission and the Government e-Marketplace (GeM) to showcase bamboo products.

- Ans
- 1. Indian Gold Collection
 - 2. Indian Bamboo Collection
 - 3. Green Wood Collection
 - 4. Green Gold Collection

Question ID : 65497830291
Status : Not Answered
Chosen Option : --

Q.12 The fifth storey of Qutub Minar was built during the reign of:

- Ans
- 1. Iltutmish
 - 2. Mohammad-bin-Tughlaq
 - 3. Firoz Shah Tughlaq
 - 4. Razia Sultana

Question ID : 65497830275
Status : Answered
Chosen Option : 1

Q.13 In which year was the Indian Industrial and Commercial Congress formed by Indian merchants and industrialists to organise their business interests?

- Ans
- 1. 1934
 - 2. 1909
 - 3. 1920
 - 4. 1945

Question ID : 65497830272
Status : Not Answered
Chosen Option : --

Q.14 Which of the following words in the Preamble to the Constitution describes India as a country having complete political freedom and being the supreme authority?

- Ans 1. Sovereign
 2. Democratic
 3. Socialist
 4. Secular

Question ID : 65497830285
Status : Answered
Chosen Option : 1

Q.15 Which of the following persons was NOT amongst the female judges sworn in as judges of the Supreme Court of India on 31st August 2021?

- Ans 1. Justice Indira Banerjee
 2. Justice BV Nagarathna
 3. Justice Bela M Trivedi
 4. Justice Hima Kohli

Question ID : 65497830286
Status : Answered
Chosen Option : 1

Q.16 Vikramshila Gangetic Dolphin Wildlife Sanctuary is located in which of the following states?

- Ans 1. Chhattisgarh
 2. Bihar
 3. Uttar Pradesh
 4. Goa

Question ID : 65497830271
Status : Answered
Chosen Option : 2

Q.17 _____ is a risk management strategy employed to offset losses in investments by taking an opposite position in a related asset.

- Ans 1. Scalability
 2. Hedging
 3. Amortization
 4. Collateral

Question ID : 65497830279
Status : Answered
Chosen Option : 2

Q.18 In which state was the Indo-Dutch centre of excellence (CoE) for vegetables and flowers opened in November 2020?

- Ans 1. Kerala
 2. Punjab
 3. Telangana
 4. Gujarat

Question ID : 65497830278
Status : Not Answered
Chosen Option : --

Q.19 The founder of Yes Bank is:

- Ans 1. Rajesh Kapoor
 2. Rahul Kumar
 3. Prashant Kumar
 4. Rana Kapoor

Question ID : 65497830274
Status : Answered
Chosen Option : 4

Q.20 Which of the following is a temple in Mangaluru, dedicated to an avatar of Lord Shiva?

- Ans 1. Mukteshvara Temple
 2. Ananta Vasudeva Temple
 3. Kadri Manjunatha Temple
 4. Gundicha Temple

Question ID : 65497830287
Status : Not Answered
Chosen Option : --

Q.21 'The Commonwealth of Cricket: A Lifelong Love Affair with the Most Subtle and Sophisticated Game Known to Humankind' is a book written by _____.

- Ans 1. Vinod Rai
 2. Vikram Limaye
 3. Diana Edulji
 4. Ramachandra Guha

Question ID : 65497830284
Status : Answered
Chosen Option : 4

Q.22 Sutirtha Mukherjee is an Indian _____.

- Ans 1. golfer
 2. table tennis player
 3. badminton player
 4. swimmer

Question ID : 65497830290
Status : Not Answered
Chosen Option : --

Q.23 The inaugural Olympic Congress was organised in the year 1894 in:

- Ans 1. Stockholm
 2. Oslo
 3. Paris
 4. London

Question ID : 65497830269
Status : Not Answered
Chosen Option : --

Q.24 Who among the following was elected as the speaker of the Bihar Assembly in November 2020?

- Ans**
- 1. Prem Kumar
 - 2. V jay Kumar Sinha
 - 3. Awadh Bihari Choudhary
 - 4. Jitan Ram Manjhi

Question ID : **65497830273**
Status : **Not Answered**
Chosen Option : --

Q.25 Article 76 of the Constitution of India is associated with:

- Ans**
- 1. Election Commission
 - 2. Supreme Court
 - 3. Attorney General of India
 - 4. Administrative Tribunals

Question ID : **65497830277**
Status : **Answered**
Chosen Option : **3**

Section : **Part C Elementary Mathematics**

Q.1 The difference between the compound interest and the simple interest on a certain sum at 8% per annum for 2 years is ₹144. What is the amount (in ₹)?

- Ans**
- 1. 20,500
 - 2. 24,500
 - 3. 40,000
 - 4. 22,500

Question ID : **65497830295**
Status : **Answered**
Chosen Option : **4**

Q.2 The value of $75 \div 30 - \frac{3}{4}$ of $\left(\frac{5}{7} \div \frac{9}{14}\right) - \left(3\frac{1}{3} - 1\frac{2}{3}\right)$ is:

- Ans**
- 1. 0
 - 2. 10
 - 3. 1
 - 4. 5

Question ID : **65497830298**
Status : **Answered**
Chosen Option : **1**

Q.3 After applying successive discounts of 10% and 5% on the marked price of an article, it was sold for ₹3,420. Find the marked price of the article.

- Ans**
- 1. ₹5,000
 - 2. ₹4,400
 - 3. ₹6,000
 - 4. ₹4,000

Question ID : 65497830301
Status : Answered
Chosen Option : 4

Q.4 12 spherical balls of radius 10 cm are dropped in a bucket which is full of water up to the brim. The water flowed out is collected in a cylindrical jar of radius 20 cm. What is the height (in cm) of the water in the jar? (Take $\pi = \frac{22}{7}$)

- Ans**
- 1. 45
 - 2. 32
 - 3. 40
 - 4. 18

Question ID : 65497830297
Status : Answered
Chosen Option : 3

Q.5 Raghu and Raman start together to walk a certain equal distance at a speed of 10 km/h and 8 km/h, respectively. Raghu arrives 30 minutes before Raman arrives. Find the distance between the start and the end point.

- Ans**
- 1. 25 km
 - 2. 28 km
 - 3. 24 km
 - 4. 20 km

Question ID : 65497830299
Status : Answered
Chosen Option : 4

Q.6 The sum of two numbers m and n is 84 ($m > n$) and their difference is 6. What is the ratio of the two numbers?

- Ans**
- 1. 4 : 3
 - 2. 17 : 15
 - 3. 9 : 8
 - 4. 15 : 13

Question ID : 65497830316
Status : Answered
Chosen Option : 4

Q.7 Soni and Gita together can complete a job in 8 h and Arti alone can complete the job in 12 h. In how many hours can Gita alone complete the job?

- Ans**
- 1. 48
 - 2. 12
 - 3. 24
 - 4. 14

Question ID : 65497830302
Status : Marked For Review
Chosen Option : 3

Q.8 The speed of a train is 110 km/h. It is increased by 20% and then runs at uniform speed. The train driver sees the 'Slow Down' sign, so he reduces the speed of the train by 40% of the speed at that moment. What is the final speed (in km/h, correct to one decimal place) of the train?

- Ans**
- 1. 69.2
 - 2. 75.5
 - 3. 66.5
 - 4. 79.2

Question ID : 65497830312
Status : Answered
Chosen Option : 4

Q.9 The average weight of 24 persons in a group is 72 kg. If 3 persons with average weight 78 kg leave the group and 4 persons of average weight 75 kg join the group, then what will be the average weight (in kg) of the persons in the group now?

- Ans**
- 1. 66.5
 - 2. 71.76
 - 3. 67.74
 - 4. 67.8

Question ID : 65497830306
Status : Answered
Chosen Option : 2

Q.10 Let x be a number between 1420 and 1780 such that when x is divided by 10, 15, 24 and 32, the remainder in each case is 7. The sum of the digits of x is:

- Ans**
- 1. 22
 - 2. 13
 - 3. 16
 - 4. 19

Question ID : 65497830305
Status : Answered
Chosen Option : 3

Q.11 The least number of square tiles required to pave the floor of a room with dimensions 15 metres and 12 metres will be:

- Ans** 1. 20
 2. 16
 3. 15
 4. 60

Question ID : 65497830303
Status : Answered
Chosen Option : 1

Q.12 A can do a certain piece of work in 20 days. B is 25% more efficient than A, and C is 20% more efficient than B. A and C work together for 5 days. B alone will complete the remaining work in:

- Ans** 1. 9 days
 2. 8 days
 3. 6 days
 4. 5 days

Question ID : 65497830313
Status : Answered
Chosen Option : 3

Q.13 By selling an article for ₹170, a man loses 15%. What per cent will he gain or lose, if he sells it for ₹206.40?

- Ans** 1. Loss, 1.6%
 2. Loss, 3.2%
 3. Gain, 3.2%
 4. Gain, 1.6%

Question ID : 65497830309
Status : Answered
Chosen Option : 3

Q.14 Seema is younger than Reema by 8 years. If 4 years back, their ages were in the ratio 1 : 2, then the age (in years) of Seema after 6 years from now will be:

- Ans** 1. 24
 2. 18
 3. 20
 4. 12

Question ID : 65497830296
Status : Answered
Chosen Option : 2

Q.15 A trader sells an item for ₹805 after offering a discount of 12.5% on its marked price. Had he not offered the discount, he would have earned a profit of 15%. What is the cost price (in ₹) of the item?

- Ans** 1. 780
 2. 700
 3. 800
 4. 750

Question ID : 65497830315
Status : Answered

Q.16 The speed of a boat in still water is 10 km/h. The time taken by the boat to go 35 km downstream is 1.25 times the time taken by it to go 14 km upstream. How much time (in hours) will it take to go 60 km downstream?

- Ans**
- 1. 3
 - 2. 3.5
 - 3. 4
 - 4. 4.5

Question ID : 65497830314
Status : Answered
Chosen Option : 4

Q.17 The marked price of an article is ₹450. It is sold for ₹267.30, after offering three successive discounts of 10%, x %, and 20%. What is the value of x ?

- Ans**
- 1. 16.5
 - 2. 17.5
 - 3. 18
 - 4. 19

Question ID : 65497830311
Status : Answered
Chosen Option : 2

Q.18 P sold a lamp to Q at a profit of 20%. Later, Q sold the same lamp to P at a profit of 30%, thereby making a profit of ₹108. How much (in ₹) did P pay originally for the lamp?

- Ans**
- 1. 300
 - 2. 330
 - 3. 320
 - 4. 280

Question ID : 65497830294
Status : Answered
Chosen Option : 1

Q.19 A number is decreased by 25% and then increased by 25%. The net percentage increase or decrease is:

- Ans**
- 1. 2.5% decrease
 - 2. $6\frac{1}{4}$ % decrease
 - 3. $3\frac{2}{3}$ % increase
 - 4. 4% decrease

Question ID : 65497830304
Status : Answered
Chosen Option : 2

Q.20 A certain sum amounts to ₹8,640 in 2 years at simple interest and to ₹9,720 in 3 years. The sum (in ₹) and the rate of interest p.a., respectively, are:

- Ans
- 1. ₹6,450 and 15%
 - 2. ₹6,450 and $16\frac{2}{3}\%$
 - 3. ₹6,480 and $16\frac{2}{3}\%$
 - 4. ₹6,480 and 15%

Question ID : 65497830308
Status : Answered
Chosen Option : 3

Q.21 The ratio of the incomes of A and B is 4 : 5 and the ratio of their expenditures is 2 : 3. If A and B save ₹7,200 and ₹6,000, respectively, then the income (in ₹) of A is:

- Ans
- 1. 19,200
 - 2. 20,000
 - 3. 24,000
 - 4. 18,000

Question ID : 65497830307
Status : Answered
Chosen Option : 1

Q.22 The average weight of 56 students in a group is 55 kg. If 12 students of average weight 60 kg leave and 6 students of average weight 52.5 kg join the group, then the average weight of the remaining students in the group decreases by:

- Ans
- 1. 2 kg
 - 2. 1.8 kg
 - 3. 1.5 kg
 - 4. 2.5 kg

Question ID : 65497830310
Status : Answered
Chosen Option : 3

Q.23 The value of $[6 + 3 \text{ of } 7 - 5] \div 2 \text{ of } 11$ is:

- Ans
- 1. 22
 - 2. 11
 - 3. 1
 - 4. 121

Question ID : 65497830300
Status : Answered
Chosen Option : 3

Q.24 Three solid metallic cubes of sides 6 cm, 8 cm and 10 cm, respectively, were melted to form a new solid cube.
Find the side (in cm) of the new solid cube.

- Ans
- 1. 9
 - 2. 12
 - 3. 8
 - 4. 12.5

Question ID : 65497830318
Status : Answered
Chosen Option : 2

Q.25 The difference between the compound interest and the simple interest on a certain sum at 5% per annum for 2 years is ₹152. What is the amount (in ₹)?

- Ans
- 1. 50,500
 - 2. 60,000
 - 3. 60,800
 - 4. 10,500

Question ID : 65497830317
Status : Answered
Chosen Option : 3

Section : Part D English

Q.1 Select the option that can be used as a one-word substitute for the given group of words.

An object through which we cannot see at all

- Ans
- 1. Opaque
 - 2. Translucent
 - 3. Transparent
 - 4. Crystal

Question ID : 65497830326
Status : Answered
Chosen Option : 1

Q.2 Select the most appropriate option to fill in the blank.

The socio-economic policy has been the _____ of much debate.

- Ans
- 1. subject
 - 2. talk
 - 3. object
 - 4. concept

Question ID : 65497830335
Status : Answered
Chosen Option : 1

Q.3 Select the option that can be used as a one-word substitute for the given group of words.

Imitate someone's action or words in order to entertain or ridicule

- Ans 1. Copy
 2. Mimic
 3. Repeat
 4. Duplicate

Question ID : 65497830332
Status : Answered
Chosen Option : 2

Q.4 Select the most appropriate meaning of the given idiom.

To beat around the bush

- Ans 1. To explain something in detail
 2. To avoid noticing someone
 3. To discuss the main topic
 4. To avoid the main issue

Question ID : 65497830329
Status : Answered
Chosen Option : 4

Q.5 Select the option that will improve the underlined part of the given sentence. In case no improvement is needed, select 'No improvement required'.

The movie theatre is a excited place where people can relax and enjoy the experience.

- Ans 1. exciting
 2. the excited
 3. No improvement required
 4. an exciting

Question ID : 65497830338
Status : Answered
Chosen Option : 4

Q.6 Select the INCORRECTLY spelt word.

- Ans 1. Omission
 2. Remission
 3. Recession
 4. Precission

Question ID : 65497830333
Status : Answered
Chosen Option : 4

Q.7 Select the most appropriate meaning of the given idiom.

Drop names

- Ans**
- 1. Delete someone's name from a list
 - 2. Show disrespect to someone's name
 - 3. Assume a false name
 - 4. Name famous people to impress others

Question ID : **65497830337**
Status : **Not Answered**
Chosen Option : --

Q.8 Select the **INCORRECTLY** spelt word.

- Ans**
- 1. Collection
 - 2. Complaint
 - 3. Coessponding
 - 4. Consolidation

Question ID : **65497830324**
Status : **Answered**
Chosen Option : **3**

Q.9 Select the most appropriate synonym of the given word.

Defy

- Ans**
- 1. Disobey
 - 2. Destroy
 - 3. Abide
 - 4. React

Question ID : **65497830331**
Status : **Answered**
Chosen Option : **1**

Q.10 Select the most appropriate synonym of the given word.

Stun

- Ans**
- 1. Shock
 - 2. Trick
 - 3. Joke
 - 4. Jest

Question ID : **65497830321**
Status : **Answered**
Chosen Option : **1**

Q.11 Select the option that can be used as a one-word substitute for the given group of words.

Release someone from a duty or obligation

- Ans
- 1. Banish
 - 2. Expel
 - 3. Dismiss
 - 4. Exonerate

Question ID : 65497830323
Status : Answered
Chosen Option : 2

Q.12 Select the option that will improve the underlined part of the sentence. In case no improvement is needed, select 'No improvement required'.

The decision to become a doctor is completely hers.

- Ans
- 1. No improvement required
 - 2. are completely her
 - 3. is complete her's
 - 4. is completely her

Question ID : 65497830325
Status : Answered
Chosen Option : 1

Q.13 The following sentence has been split into four segments. Identify the segment that contains a grammatical error.

The president forced / to leave the country / when the people rose up against / the government.

- Ans
- 1. when the people rose up against
 - 2. the government
 - 3. to leave the country
 - 4. The president forced

Question ID : 65497830330
Status : Answered
Chosen Option : 4

Q.14 The following sentence has been split into four segments. Identify the segment that contains a grammatical error.

The education of girls / is a primary concern for the country, / so it should be started early, / isn't it?

- Ans
- 1. The education of girls
 - 2. so it should be started early
 - 3. is a primary concern for the country
 - 4. isn't it

Question ID : 65497830319
Status : Answered
Chosen Option : 4

Q.15 Select the most appropriate ANTONYM of the given word.

Alert

- Ans 1. Aware
 2. Active
 3. Ready
 4. Careless

Question ID : 65497830322
Status : Answered
Chosen Option : 4

Q.16 Select the most appropriate option to fill in the blank.

Teams from all over India _____ in the talent show.

- Ans 1. participated
 2. proh bited
 3. produced
 4. provided

Question ID : 65497830328
Status : Answered
Chosen Option : 1

Q.17 The following sentence has been split into four segments. Identify the segment that contains a grammatical error.

The lady was furious / to see that no one / were wearing masks / on the road near the shop.

- Ans 1. The lady was furious
 2. on the road near the shop
 3. were wearing masks
 4. to see that no one

Question ID : 65497830320
Status : Answered
Chosen Option : 3

Q.18 Select the option that will improve the underlined part of the given sentence. In case no improvement is needed, select 'No improvement required'.

Unless we sat in an incorrect posture, we may strain our back.

- Ans 1. Until we sit
 2. If we sit
 3. Although we are sitting
 4. No improvement required

Question ID : 65497830327
Status : Answered
Chosen Option : 2

Q.19 Select the most appropriate **ANTONYM** of the given word.

Vulnerable

- Ans** 1. Secure
 2. Breakable
 3. Tender
 4. Sensitive

Question ID : **65497830336**
Status : **Answered**
Chosen Option : **1**

Q.20 Select the most appropriate option to fill in the blank.

For a member to borrow money from the association, three _____ need to be met.

- Ans** 1. points
 2. accounts
 3. restrictions
 4. conditions

Question ID : **65497830334**
Status : **Answered**
Chosen Option : **4**

Comprehension:

In the following passage, some words have been deleted. Read the passage carefully and select the most appropriate option to fill in each blank.

You should elect me as Class President as I think that everyone's (1)_____ matters. I am a confident speaker and have won prizes (2)_____ public speaking. I will make sure that the school council (3)_____ to us. When people come to me with problems, I (4) _____listen carefully. I never judge people who come to me for (5)_____. You can count on me for help.

SubQuestion No : 21

Q.21 Select the most appropriate option to fill in blank no.1.

- Ans** 1. reaction
 2. estimate
 3. theorem
 4. opinion

Question ID : **65497830340**
Status : **Answered**
Chosen Option : **4**

Comprehension:

In the following passage, some words have been deleted. Read the passage carefully and select the most appropriate option to fill in each blank.

You should elect me as Class President as I think that everyone's (1)_____ matters. I am a confident speaker and have won prizes (2)_____ public speaking. I will make sure that the school council (3)_____ to us. When people come to me with problems, I (4) _____listen carefully. I never judge people who come to me for (5)_____. You can count on me for help.

SubQuestion No : 22**Q.22 Select the most appropriate option to fill in blank no.2.**

- Ans 1. on
 2. for
 3. by
 4. of

Question ID : 65497830341

Status : Answered

Chosen Option : 2

Comprehension:

In the following passage, some words have been deleted. Read the passage carefully and select the most appropriate option to fill in each blank.

You should elect me as Class President as I think that everyone's (1)_____ matters. I am a confident speaker and have won prizes (2)_____ public speaking. I will make sure that the school council (3)_____ to us. When people come to me with problems, I (4) _____listen carefully. I never judge people who come to me for (5)_____. You can count on me for help.

SubQuestion No : 23**Q.23 Select the most appropriate option to fill in blank no.3.**

- Ans 1. accepts
 2. hears
 3. believes
 4. listens

Question ID : 65497830342

Status : Answered

Chosen Option : 4

Comprehension:

In the following passage, some words have been deleted. Read the passage carefully and select the most appropriate option to fill in each blank.

You should elect me as Class President as I think that everyone's (1)_____ matters. I am a confident speaker and have won prizes (2)_____ public speaking. I will make sure that the school council (3)_____ to us. When people come to me with problems, I (4) _____listen carefully. I never judge people who come to me for (5)_____. You can count on me for help.

SubQuestion No : 24**Q.24 Select the most appropriate option to fill in blank no.4.**

- Ans 1. barely
 2. always
 3. seldom
 4. never

Question ID : 65497830343

Status : Answered

Chosen Option : 2

Comprehension:

In the following passage, some words have been deleted. Read the passage carefully and select the most appropriate option to fill in each blank.

You should elect me as Class President as I think that everyone's (1)_____ matters. I am a confident speaker and have won prizes (2)_____ public speaking. I will make sure that the school council (3)_____ to us. When people come to me with problems, I (4) _____listen carefully. I never judge people who come to me for (5)_____. You can count on me for help.

SubQuestion No : 25**Q.25 Select the most appropriate option to fill in blank no.5.**

- Ans 1. advice
 2. news
 3. lesson
 4. caution

Question ID : 65497830344
Status : Answered
Chosen Option : 1

Section : Part D Hindi

Q.1 दिये गये वाक्य के किस भाग में त्रुटि है?

इस ग्रथ की इतिहासिकता अत्यंत सदिग्ध है।

- Ans 1. अत्यंत
 2. इस ग्रथ
 3. सदिग्ध है।
 4. की इतिहासिकता

Question ID : 65497830358
Status : Not Answered
Chosen Option : --

Q.2 निम्नलिखित में से शुद्ध वर्तनी वाला शब्द कौन सा है?

- Ans 1. तिरस्कार
 2. तिरष्कार
 3. तीरस्कार
 4. तिरश्कार

Question ID : 65497830356
Status : Not Answered
Chosen Option : --

Q.3 दिए गए वाक्य में रेखांकित खंड को प्रतिस्थापित करने के लिए सबसे उपयुक्त विकल्प का चयन करें। यदि इसे प्रतिस्थापित करने की आवश्यकता नहीं है, तो विकल्प 'किसी बदलाव की आवश्यकता नहीं है' का चयन करें।

इसका उत्तरदायित्व मेरे ऊपर है।

- Ans 1. मुझ पर
 2. मुझ ऊपर
 3. मेरे पर
 4. किसी बदलाव की आवश्यकता नहीं है।

Question ID : 65497830352
Status : Not Answered
Chosen Option : --

Q.4 दिये गये वाक्यांश के लिए एक शब्द दीजिये।

मध्य रात्रि का समय

- Ans
- 1. प्रदोष
 - 2. उषाकाल
 - 3. निशीथ
 - 4. विभावरी

Question ID : 65497830354
Status : Not Answered
Chosen Option : --

Q.5 दिए गए शब्द के समानार्थी शब्द का चयन करें।

घृणा

- Ans
- 1. नफ़रत
 - 2. रिपु
 - 3. चाय
 - 4. करी

Question ID : 65497830346
Status : Not Answered
Chosen Option : --

Q.6 दिये गये वाक्य में रेखांकित अश को प्रतिस्थापित करने के लिए सबसे उपयुक्त विकल्प का चयन करें।

सैनिको ने देश को भारी सकट से रोक दिया।

- Ans
- 1. रोक लिया।
 - 2. भगा दिया
 - 3. बचा लिया।
 - 4. हटा दिया।

Question ID : 65497830361
Status : Not Answered
Chosen Option : --

Q.7 दिए गए वाक्य का वह भाग ज्ञात करें जिसमें कोई त्रुटि है। यदि कोई त्रुटि नहीं है, तो 'कोई त्रुटि नहीं है' विकल्प को चुनें।

मालिन ने माला गुँथ लिया।

- Ans
- 1. गुँथ लिया
 - 2. माला
 - 3. मालिन ने
 - 4. कोई त्रुटि नहीं

Question ID : 65497830345
Status : Not Answered
Chosen Option : --

Q.8 रिक्त स्थान की पूर्ति के लिए सबसे उपयुक्त विकल्प का चयन करें।

धमकी देते हुए बदमाश लोगो को _____ रहा था।

- Ans
- 1. ताक
 - 2. झाँक
 - 3. घूर
 - 4. देख

Question ID : 65497830364
Status : Not Answered
Chosen Option : --

Q.9 रिक्त स्थान की पूर्ति के लिए सबसे उपयुक्त शब्द का चयन करें।

कमल का पुष्प _____ होता है।

- Ans
- 1. निर्मल
 - 2. कोमल
 - 3. विमल
 - 4. सुकोमल

Question ID : 65497830350
Status : Not Answered
Chosen Option : --

Q.10 दिए गए वाक्य का वह भाग ज्ञात करें जिसमें कोई त्रुटि है। यदि कोई त्रुटि नहीं है, तो 'कोई त्रुटि नहीं है' चुनें।

नदियों के (1)/ बाढ़ ने (2)/ तबाही मचा दी है (3)/ कोई त्रुटि नहीं है (4)

- Ans
- 1. 2
 - 2. 3
 - 3. 4
 - 4. 1

Question ID : 65497830351
Status : Not Answered
Chosen Option : --

Q.11 निम्न चार विकल्पों में से, उस विकल्प का चयन करें जो दिए गये मुहावरे का अर्थ व्यक्त करता है-

चटनी हो जाना

- Ans
- 1. बर्बाद हो जाना
 - 2. कुचल जाना
 - 3. बहुत जल्द खर्च हो जाना
 - 4. पिस जाना

Question ID : 65497830348
Status : Not Answered
Chosen Option : --

Q.12 'गिरि' का पर्यायवाची है-

- Ans
- 1. आकाश
 - 2. धरती
 - 3. पर्वत
 - 4. बादल

Question ID : 65497830359
Status : Not Answered
Chosen Option : --

Q.13 दिये गये वाक्य में रेखांकित अश को प्रतिस्थापित करने के लिए सबसे उपयुक्त विकल्प का चयन करें।

भारत एक ताकतवर देश है।

- Ans
- 1. शक्तिशाली
 - 2. प्रभावशाली
 - 3. दुर्बल
 - 4. अविकसित

Question ID : 65497830360
Status : Not Answered
Chosen Option : --

Q.14 'जिसे त्याग देना उचित हो' वाक्यांश के लिए एक शब्द होगा-

- Ans
- 1. त्याज्य
 - 2. त्यागी
 - 3. वाछनीय
 - 4. त्यागपत्र

Question ID : 65497830363
Status : Not Answered
Chosen Option : --

Q.15 दिए गए शब्द का विलोम चुनें।

मधुर

- Ans
- 1. तिक्त
 - 2. लवण
 - 3. अम्ल
 - 4. कटु

Question ID : 65497830353
Status : Not Answered
Chosen Option : --

Q.16 दिए गये वाक्यांश के लिए एक शब्द दीजिये-

किसी के पीछे-पीछे चलने वाला

- Ans
- 1. अनुज
 - 2. सहचर
 - 3. अनुकरणीय
 - 4. अनुगामी

Question ID : 65497830349
Status : Not Answered
Chosen Option : --

Q.17 'पाँव उखड़ना' मुहावरे का सही अर्थ है-

- Ans 1. हारकर भाग जाना
 2. घायल होना
 3. गिर पड़ना
 4. आत्मसमर्पण करना

Question ID : 65497830362
Status : Not Answered
Chosen Option : --

Q.18 निम्नलिखित में से शुद्ध वर्तनी वाला शब्द कौन सा है?

- Ans 1. उज्ज्वल
 2. उज्वल
 3. उजवल
 4. उज्ज्वल

Question ID : 65497830357
Status : Not Answered
Chosen Option : --

Q.19 दिए गए शब्द के विलोम शब्द का चयन करें-

सहित

- Ans 1. असहित
 2. विमुख
 3. असीम
 4. विहीन

Question ID : 65497830347
Status : Not Answered
Chosen Option : --

Q.20 रिक्त स्थान की पूर्ति के लिए सबसे उपयुक्त शब्द का चयन करें।

आजकल वहाँ काफी सरगर्मी _____ है।

- Ans 1. दिखती
 2. वायवीय
 3. सभावित
 4. दृष्टिकोण

Question ID : 65497830355
Status : Not Answered
Chosen Option : --

Comprehension:

दिए गए गद्यांश में से कुछ शब्द हटा दिए गए हैं। विकल्पों की सहायता से प्रत्येक सखा के लिए सबसे उपयुक्त विकल्प का चयन करें।

सगीत का मानव- (1) _____ में विशेष स्थान है। प्रकृति का कण-कण सगीत से (2) _____ है। बाल-वृद्ध, नर-नारी सभी अनादि काल से उससे (3) _____ होते आये हैं और सदैव होते रहेंगे। शिशु की (4) _____ में, सरिता के (5) _____ निनाद में सगीत ही तो है।

SubQuestion No : 21

Q.21 गद्यांश के रिक्त स्थान (1) के लिए सर्वाधिक उपयुक्त शब्द होगा-

- Ans 1. मस्तिष्क
 2. जीवन
 3. हृदय
 4. ससार

Question ID : 65497830366

Status : Not Answered

Chosen Option : --

Comprehension:

दिए गए गद्यांश में से कुछ शब्द हटा दिए गए हैं। विकल्पों की सहायता से प्रत्येक सखा के लिए सबसे उपयुक्त विकल्प का चयन करें।

सगीत का मानव- (1) _____ में विशेष स्थान है। प्रकृति का कण-कण सगीत से (2) _____ है। बाल-वृद्ध, नर-नारी सभी अनादि काल से उससे (3) _____ होते आये हैं और सदैव होते रहेंगे। शिशु की (4) _____ में, सरिता के (5) _____ निनाद में सगीत ही तो है।

SubQuestion No : 22

Q.22 गद्यांश के रिक्त स्थान (2) के लिए सर्वाधिक उपयुक्त शब्द होगा-

- Ans 1. ओत-प्रोत
 2. सराबोर
 3. डूबा
 4. भीगा

Question ID : 65497830367

Status : Not Answered

Chosen Option : --

Comprehension:

दिए गए गद्यांश में से कुछ शब्द हटा दिए गए हैं। विकल्पों की सहायता से प्रत्येक सखा के लिए सबसे उपयुक्त विकल्प का चयन करें।

सगीत का मानव- (1) _____ में विशेष स्थान है। प्रकृति का कण-कण सगीत से (2) _____ है। बाल-वृद्ध, नर-नारी सभी अनादि काल से उससे (3) _____ होते आये हैं और सदैव होते रहेंगे। शिशु की (4) _____ में, सरिता के (5) _____ निनाद में सगीत ही तो है।

SubQuestion No : 23

Q.23 गद्यांश के रिक्त स्थान (3) के लिए सर्वाधिक उपयुक्त शब्द होगा-

- Ans 1. तृप्त
 2. गतिशील
 3. सचालित
 4. प्रभावित

Question ID : 65497830368

Status : Not Answered

Chosen Option : --

Comprehension:

दिए गए गद्यांश में से कुछ शब्द हटा दिए गए हैं। विकल्पों की सहायता से प्रत्येक सखा के लिए सबसे उपयुक्त विकल्प का चयन करें।

सगीत का मानव- (1) _____ में विशेष स्थान है। प्रकृति का कण-कण सगीत से (2) _____ है। बाल-वृद्ध, नर-नारी सभी अनादि काल से उससे (3) _____ होते आये हैं और सदैव होते रहेंगे। शिशु की (4) _____ में, सरिता के (5) _____ निनाद में सगीत ही तो है।

SubQuestion No : 24

Q.24 गद्यांश के रिक्त स्थान (4) के लिए सर्वाधिक उपयुक्त शब्द होगा-

- Ans
- 1. हलचल
 - 2. नटखटपन
 - 3. कलरव
 - 4. मुस्कान

Question ID : 65497830369

Status : Not Answered

Chosen Option : --

Comprehension:

दिए गए गद्यांश में से कुछ शब्द हटा दिए गए हैं। विकल्पों की सहायता से प्रत्येक सखा के लिए सबसे उपयुक्त विकल्प का चयन करें।

सगीत का मानव- (1) _____ में विशेष स्थान है। प्रकृति का कण-कण सगीत से (2) _____ है। बाल-वृद्ध, नर-नारी सभी अनादि काल से उससे (3) _____ होते आये हैं और सदैव होते रहेंगे। शिशु की (4) _____ में, सरिता के (5) _____ निनाद में सगीत ही तो है।

SubQuestion No : 25

Q.25 गद्यांश के रिक्त स्थान (5) के लिए सर्वाधिक उपयुक्त शब्द होगा-

- Ans
- 1. छुल-छुल
 - 2. छल-छल
 - 3. कल-कल
 - 4. झर-झर

Question ID : 65497830370

Status : Not Answered

Chosen Option : --

**SSC
GD**

Previous Year Paper
17 Nov 2021 Shift 3

Exam Date	17/11/2021
Exam Time :	4:00 PM - 5:30 PM
Subject	Constable GD 2021

Section : Part A General Intelligence and Reasoning

Q.1 What is the difference between the compound interest on ₹40,000 at 20% per annum compounded half-yearly and compounded quarterly for a period of one year?

- Ans
- 1. ₹320.25
 - 2. ₹8,400
 - 3. ₹8,620.25
 - 4. ₹220.25

Question ID : 65497832156
 Status : Answered
 Chosen Option : 1

Q.2 'P × Q' means 'P is the wife of Q'. 'P + Q' means 'P is the father of Q'. 'P ÷ Q' means 'P is the daughter of Q'. 'P - Q' means 'P is the son of Q'. How is E related to I in the expression 'E ÷ F + G - H ÷ I'?

- Ans
- 1. Daughter-in-law
 - 2. Sister
 - 3. Granddaughter
 - 4. Grandson

Question ID : 65497832173
 Status : Answered
 Chosen Option : 3

Q.3 Select the correct option that indicates the arrangement of the given words in the order in which they appear in an English dictionary.

1. Manager
2. Manicure
3. Manner
4. Mammal
5. Mandible

- Ans
- 1. 3, 4, 2, 1, 5
 - 2. 4, 1, 5, 2, 3
 - 3. 1, 4, 5, 2, 3
 - 4. 4, 1, 5, 3, 2

Question ID : 65497832149
 Status : Answered
 Chosen Option : 2

Q.4 Select the combination of letters that when sequentially placed in the blanks of the given series will complete the series.

T _ D S _ R _ S T R D _ T _ D S _ R _ S

- Ans 1. R T D T R D T
 2. D T D S S T
 3. R T D S R T D
 4. D T R S R T D

Question ID : 65497832150
Status : Answered
Chosen Option : 3

Q.5 Select the letter-cluster from among the given options that can replace the question mark (?) in the following series.

BFI, EIL, HLO, KOR, ?

- Ans 1. HNM
 2. QSV
 3. LPS
 4. NRU

Question ID : 65497832167
Status : Answered
Chosen Option : 4

Q.6 Six people, F, G, H, I, J and K, are standing opposite to each other in a circle, facing towards the centre. F and G are adjacent to each other. F and K are opposite to each other. H is opposite to I. J is opposite to G. K is second to the left of H. Who is standing between F and I?

- Ans 1. K
 2. J
 3. H
 4. G

Question ID : 65497832169
Status : Answered
Chosen Option : 4

Q.7 Study the given pattern carefully and select the number that can replace the question mark (?) in it.

15 30 33
16 26 19
62 122 ?

- Ans 1. 124
 2. 128
 3. 117
 4. 104

Question ID : 65497832155
Status : Answered
Chosen Option : 4

Q.8 In a certain code language, HIDDEN is written as IJECDM. How will FELLOW be written as in that language?

- Ans
- 1. EDKGNU
 - 2. EDKMPZ
 - 3. GFMPZ
 - 4. GFMKNV

Question ID : 65497832153
Status : Answered
Chosen Option : 4

Q.9 Four letter-clusters have been given, out of which three are alike in some manner and one is different. Select the letter-cluster that is different.

- Ans
- 1. YUSR
 - 2. GDBA
 - 3. IFDC
 - 4. ZWUT

Question ID : 65497832163
Status : Answered
Chosen Option : 1

Q.10 Select the number from among the given options that can replace the question mark (?) in the following series.

128, 109, ?, 77, 64, 53, 44

- Ans
- 1. 88
 - 2. 81
 - 3. 92
 - 4. 100

Question ID : 65497832151
Status : Answered
Chosen Option : 3

Q.11 In a certain code language, 'TWO' is coded as '3' and 'FIVE' is coded as '4'. How will 'EIGHT' be coded in that language?

- Ans
- 1. 7
 - 2. 9
 - 3. 5
 - 4. 8

Question ID : 65497832164
Status : Answered
Chosen Option : 3

Q.12 Eleven people are sitting across a rectangular table. Four persons are sitting on each longest side of the table. Boss is sitting alone at one side of the table. N and O are sitting beside each other on one of the shortest side of table. H is sitting opposite to E and between G and N. A is sitting opposite to C and between M and D. B is opposite to D and between C and G. F is sitting opposite to G. Who among them is a Boss?

- Ans
- 1. F
 - 2. M
 - 3. A
 - 4. G

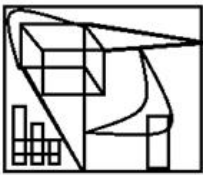
Question ID : 65497832158
Status : Answered
Chosen Option : 2

Q.13 'Printer' is related to 'Hardware' in the same way as 'Web Browser' is related to '_____'.
'_____'

- Ans
- 1. Google Chrome
 - 2. Software
 - 3. Windows
 - 4. Operating System

Question ID : 65497832168
Status : Answered
Chosen Option : 2

Q.14 Select the option that is embedded in the given figure (rotation is NOT allowed).



- Ans
- 1.
 - 2.
 - 3.
 - 4.

Question ID : 65497832162
Status : Answered
Chosen Option : 1

Q.15 Read the given statements and conclusions carefully. Assuming that the information given in the statements is true, even if it appears to be at variance with commonly known facts, decide which of the given conclusions logically follow(s) from the statements.

Statements:

1. All flowers are tulips.
2. No tulips are whites.

Conclusions:

- I. All tulips are flowers.
- II. Some tulips are whites.

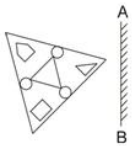
- Ans** ✓ 1. Neither conclusion I nor conclusion II follows.
✗ 2. Both the conclusions follow.
✗ 3. Only conclusion II follows.
✗ 4. Only conclusion I follows.

Question ID : 65497832154

Status : Answered

Chosen Option : 1

Q.16 Select the correct mirror image of the given figure when the mirror is placed at 'AB' as shown.



Ans

✗ 1.



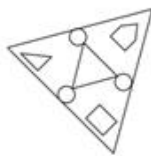
✗ 2.



✗ 3.



✓ 4.

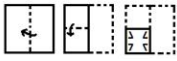


Question ID : 65497832166

Status : Answered

Chosen Option : 4

Q.17 The sequence of folding a piece of paper and the manner in which the folded paper has been cut is shown in the following figures. How would this paper look when unfolded?



Ans

1.



2.



3.



4.



Question ID : 65497832157

Status : Answered

Chosen Option : 3

Q.18 Select the number from among the given options that can replace the question mark (?) in the following series.

37, 41, 50, 66, ?

Ans

1. 101

2. 91

3. 85

4. 97

Question ID : 65497832165

Status : Answered

Chosen Option : 2

Q.19 Select the option that is related to the third number in the same way as the second number is related to the first number.

15 : 231 :: 16 : ?

Ans

1. 251

2. 256

3. 260

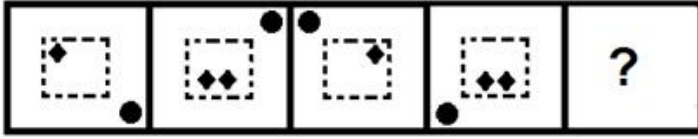
4. 262

Question ID : 65497832159

Status : Answered

Chosen Option : 4

Q.20 Select the figure that will come next in the following figure series.



Ans

- 1.
- 2.
- 3.
- 4.

Question ID : 65497832152
 Status : Answered
 Chosen Option : 3

Q.21 Select the option that is related to the third letter-cluster in the same way as the second letter-cluster is related to the first letter-cluster.

FEW : GYH :: YOU : ?

- 1. QAW
- 2. WQA
- 3. QWA
- 4. AQW

Question ID : 65497832171
 Status : Answered
 Chosen Option : 3

Q.22 If 'P' denotes 'addition', 'D' denotes 'subtraction', 'S' denotes 'multiplication', and 'V' denotes 'division', then what will be the value of the following expression?

15 S 2 P 2 (11 S 2) D 75 V 15 D 4 (9 S 4)

- 1. -75
- 2. 75
- 3. 85
- 4. -85

Question ID : 65497832160
 Status : Answered
 Chosen Option : 1

Q.23 If 'white' is called 'black', 'black' is called 'grey', 'grey' is called 'red', 'red' is called 'green', 'green' is called 'blue' and 'blue' is called 'yellow', then what will be the colour of 'Stop' signal light?

- Ans
- 1. Blue
 - 2. Green
 - 3. Grey
 - 4. Yellow



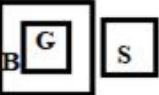

Question ID : 65497832172
Status : Answered
Chosen Option : 2

Q.24 Select the Venn diagram that best represents the relationship between the following classes.

Girls, Boys, Students

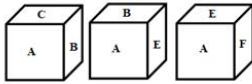
(G: Girls; B: Boys; S: Students)

Ans

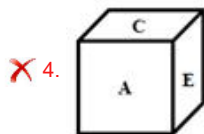
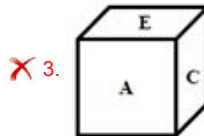
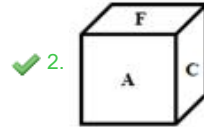
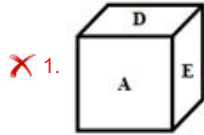
- 1. 
- 2. 
- 3. 
- 4. 

Question ID : 65497832170
Status : Answered
Chosen Option : 1

Q.25 A dice is thrown three times. Its different positions are as shown. Select its next possible position from the given options.



Ans



Question ID : 65497832161
Status : Answered
Chosen Option : 2

Section : Part B General Knowledge and General Awareness

Q.1 Which of the following states is associated with the dance drama folk theatre form 'Yakshagana'?

- Ans 1. Karnataka
 2. Andhra Pradesh
 3. Telangana
 4. Kerala

Question ID : 65497832181
Status : Answered
Chosen Option : 1

Q.2 A sphygmomanometer is used to measure which of the following?

- Ans 1. Electric current
 2. Humidity
 3. Wind
 4. Blood pressure

Question ID : 65497832182
Status : Answered
Chosen Option : 2

Q.3 Which of the following chemicals is used to cause artificial rain (cloud seeding)?

- Ans 1. Hydrogen bromide
 2. Silver iodide
 3. Silver oxide
 4. Aluminium sulphide

Question ID : 65497832183
Status : Answered
Chosen Option : 1

Q.4 Which of the following statements is NOT true regarding 'Spring tides'?

- Ans 1. These tides are the highest.
 2. These tides are the lowest.
 3. These tides occur on new moon days.
 4. These tides occur during full moon days.

Question ID : 65497832193
Status : Answered
Chosen Option : 2

Q.5 Besides banks, the other formal major source of cheap credit in rural areas, are:

- Ans 1. money lenders
 2. zamindars
 3. the cooperative societies
 4. friends and relatives

Question ID : 65497832192
Status : Answered
Chosen Option : 1

Q.6 Jwala Gutta is an Indian professional _____ player.

- Ans 1. football
 2. table tennis
 3. tennis
 4. badminton

Question ID : 65497832189
Status : Answered
Chosen Option : 2

Q.7 _____ became the first Indian to win a singles match at the US Open in seven years in September 2020.

- Ans 1. Sumit Nagal
 2. Purav Raja
 3. Divij Sharan
 4. Yuki Bhambri

Question ID : 65497832177
Status : Answered
Chosen Option : 1

Q.8 Babur defeated Ibrahim Lodi and captured Delhi and Agra in the year ____.

Ans 1. 1526

2. 1694

3. 1467

4. 1372

Question ID : 65497832195

Status : Answered

Chosen Option : 1

Q.9 Who among the following cricketers won the Orange Cap in the Indian Premier League (IPL) 2020?

Ans 1. KL Rahul

2. Jimmy Neesham

3. Virat Kohli

4. MS Dhoni

Question ID : 65497832194

Status : Answered

Chosen Option : 1

Q.10 When is the Indian Armed Forces Veterans Day observed annually?

Ans 1. 15 July

2. 5 December

3. 14 January

4. 26 October

Question ID : 65497832191

Status : Answered

Chosen Option : 1

Q.11 The Battle of Kohima was fought in 1944 between:

Ans 1. Japanese forces and Communist Chinese forces

2. Royal Burmese Army and British Indian Army

3. Imperial Japanese forces and British Indian forces

4. Chinese forces and British Indian forces

Question ID : 65497832180

Status : Answered

Chosen Option : 3

Q.12 Which of the following states announced the setting up of a 'Gau Cabinet' in November 2020 for the protection and promotion of cattle?

Ans 1. Uttar Pradesh

2. Chhattisgarh

3. Madhya Pradesh

4. Bihar

Question ID : 65497832198

Status : Answered

Chosen Option : 1

Q.13 Who among the following won the Men's Singles event at the US Open 2020?

- Ans 1. Alexander Zverev
 2. Novak Djokovic
 3. Dominic Thiem
 4. Bruno Soares

Question ID : 65497832174
Status : Answered
Chosen Option : 2

Q.14 _____ tax is imposed on transactions that have a negative externality; for example, pollution.

- Ans 1. Tobin
 2. Pigovian
 3. Customs
 4. CTT

Question ID : 65497832185
Status : Answered
Chosen Option : 2

Q.15 Mahashay Dharampal Gulati, who passed away in December 2020, was the owner of iconic spice brand _____.

- Ans 1. Badshah
 2. MDH
 3. Everest
 4. Catch

Question ID : 65497832188
Status : Answered
Chosen Option : 2

Q.16 Which among the following terms denotes to the hilly parts of the Karnataka plateau?

- Ans 1. Buggyals
 2. Terai
 3. Malnad
 4. Bets

Question ID : 65497832187
Status : Answered
Chosen Option : 3

Q.17 The book 'Kashmir's Untold Story: Declassified' was written by:

- Ans 1. Iqbal Chand Malhotra and Maroof Raza
 2. C Uday Bhaskar and GD Bakshi
 3. Karan Thapar and Shobhaa De
 4. Nandita Haksar and Arundhati Roy

Question ID : 65497832184
Status : Answered
Chosen Option : 2

Q.18 The last Mughal Emperor Bahadur Shah Zafar was imprisoned in Rangoon jail by the British in the year _____.

- Ans 1. 1885
 2. 1858
 3. 1826
 4. 1862

Question ID : 65497832196
Status : Answered
Chosen Option : 2

Q.19 As per Census 2011 which one of the following states does NOT fall in the Empowered Action Group (EAG) states?

- Ans 1. Rajasthan
 2. Jharkhand
 3. Bihar
 4. Punjab

Question ID : 65497832178
Status : Not Answered
Chosen Option : --

Q.20 Which of the following dynasties was NOT a part of the Delhi Sultanate?

- Ans 1. Lodhi
 2. Khilji
 3. Sur
 4. Slave

Question ID : 65497832176
Status : Answered
Chosen Option : 3

Q.21 When did the Transgender Persons (Protection of Rights) Act, 2019 come into effect?

- Ans 1. June 2020
 2. December 2019
 3. January 2020
 4. March 2020

Question ID : 65497832190
Status : Answered
Chosen Option : 3

Q.22 In which of the following years was the Buddhist Chanting of Ladakh included in the UNESCO'S list of intangible cultural heritage?

- Ans 1. 2014
 2. 2012
 3. 2016
 4. 2013

Question ID : 65497832186
Status : Not Answered
Chosen Option : --

Q.23 The National Commission for Backward Classes Act, 1993, was repealed by The National Commission for Backward Classes (Repeal) Act in the year _____.

Ans 1. 2019

2. 2018

3. 2017

4. 2016

Question ID : 65497832197
Status : Answered
Chosen Option : 1

Q.24 What is the dominant substance that makes up the hair, nails and the top layer of skin in the human body?

Ans 1. Laminin

2. Collagen

3. Keratin

4. F bronectin

Question ID : 65497832175
Status : Answered
Chosen Option : 3

Q.25 The statutory power for exchange control was provided to Reserve Bank of India by the Foreign Exchange Regulation Act (FERA) of _____, which was subsequently replaced by a more comprehensive Foreign Exchange Regulation Act, 1973.

Ans 1. 1953

2. 1947

3. 1967

4. 1963

Question ID : 65497832179
Status : Answered
Chosen Option : 1

Section : Part C Elementary Mathematics

Q.1 If the height of a right circular cone is 24 m and its slant height is 30 m, then what is the area of its curved surface?

(Use $\pi = \frac{22}{7}$)

Ans 1. 1697.143 m²

2. 1377.423 m²

3. 1778.654 m²

4. 1267.435 m²

Question ID : 65497832220
Status : Answered
Chosen Option : 1

Q.2 By selling an article for ₹254.38, there is a gain of 10.6%. If it is sold for ₹224.25, then the loss/gain percentage will be:

- Ans**
- 1. loss, 2.5%
 - 2. gain, 2.5%
 - 3. gain, 5%
 - 4. loss, 5%

Question ID : 65497832222
Status : Answered
Chosen Option : 1

Q.3 The average of seven consecutive positive integers is 259. If the next five odd numbers are included, then what is the average of all the numbers (correct to two decimal places)?

- Ans**
- 1. 260.74
 - 2. 259.68
 - 3. 262.33
 - 4. 267.89

Question ID : 65497832206
Status : Answered
Chosen Option : 3

Q.4 If the number 6523678pq is divisible by 99, the missing digits p and q are:

- Ans**
- 1. $p = 4, q = 4$
 - 2. $p = 6, q = 2$
 - 3. $p = 2, q = 6$
 - 4. $p = 3, q = 5$

Question ID : 65497832205
Status : Answered
Chosen Option : 2

Q.5 What is the difference between the compound interest on ₹3,000 for 1 year at 5% per annum compounded yearly and that compounded half-yearly?

- Ans**
- 1. ₹ $1\frac{22}{25}$
 - 2. ₹ $1\frac{7}{8}$
 - 3. ₹ $1\frac{13}{15}$
 - 4. ₹ $1\frac{6}{7}$

Question ID : 65497832219
Status : Answered
Chosen Option : 2

Q.6 The value of $3 \times 4 \div 3$ of $24 - 3 \div 2 \times (3 - 4) \times 2 + 6 \div 4$ of 3 is:

- Ans
- 1. $-3\frac{2}{3}$
 - 2. $2\frac{1}{3}$
 - 3. $-2\frac{1}{3}$
 - 4. $3\frac{2}{3}$

Question ID : 65497832221
Status : Answered
Chosen Option : 4

Q.7 The ratio of the number of men and women in a company is 5 : 4. If the number of men and women increase by 16% and 15%, respectively, then what will be the new ratio of men and women?

- Ans
- 1. 29 : 33
 - 2. 29 : 23
 - 3. 33 : 29
 - 4. 23 : 29

Question ID : 65497832218
Status : Answered
Chosen Option : 2

Q.8 A, B and C can complete a work in 60, 30 and 20 days, respectively. In how many days can A complete the work if he is assisted by B and C together on every fifth day?

- Ans
- 1. 25
 - 2. 30
 - 3. 15
 - 4. 35

Question ID : 65497832215
Status : Answered
Chosen Option : 2

Q.9 Two numbers X and Y are such that the sum of 3% of X and 2% of Y is two-third of the sum of 2% of X and 6% of Y. The ratio of three times of X to two times of Y is:

- Ans
- 1. 4 : 3
 - 2. 5 : 9
 - 3. 3 : 4
 - 4. 9 : 5

Question ID : 65497832204
Status : Answered
Chosen Option : 4

Q.10 If 80% of $\frac{3}{4}$ of a number is 63, then the number is:

- Ans**
- 1. 105
 - 2. 95
 - 3. 115
 - 4. 110

Question ID : 65497832214
Status : Answered
Chosen Option : 1

Q.11 If a 10-digit number $643x1145y2$ is divisible by 88, then the value of $(2x - 3y)$ for the largest value of y is:

- Ans**
- 1. 15
 - 2. 27
 - 3. -15
 - 4. -27

Question ID : 65497832203
Status : Answered
Chosen Option : 4

Q.12 Akhil drives a car from his home to office at an average speed of 50 km/h and reaches office 10 minutes early. But one day due to some problem with the car, he could drive at an average speed of 30 km/h only and reached office 10 minutes late. How far is his office from home?

- Ans**
- 1. 37.5 km
 - 2. 30 km
 - 3. 25 km
 - 4. 12.5 km

Question ID : 65497832202
Status : Answered
Chosen Option : 3

Q.13 When x is subtracted from each of 43, 38, 11 and 10, then the numbers so obtained in this order are in proportion. What is the mean proportional between $(11x + 3)$ and $(9x - 2)$?

- Ans**
- 1. 35
 - 2. 25
 - 3. 30
 - 4. 20

Question ID : 65497832207
Status : Answered
Chosen Option : 3

Q.14 Rameshwar deposited a part of ₹3,28,000 in a bank in the name of his daughter aged 18 years, and the balance in the name of his son aged 19 years in such a way that they both receive equal amounts when they become 21 years of age. If the bank gives compound interest at 5% per annum, then how much did he invest in the name of his daughter?

- Ans**
- 1. ₹1,57,000
 - 2. ₹1,58,000
 - 3. ₹1,60,000
 - 4. ₹1,56,000

Question ID : 65497832200
Status : Answered
Chosen Option : 2

Q.15 During a flight of 900 km, an aircraft was slowed down due to bad weather. Its average speed for the trip was reduced by 300 km/h and the time of flight increased by 30 min. The original duration of the flight was:

- Ans**
- 1. 3 h
 - 2. 3/2 h
 - 3. 2 h
 - 4. 1 h

Question ID : 65497832216
Status : Answered
Chosen Option : 4

Q.16 What number must be added to each of the numbers 15, 9 and 5 so that the resulting numbers may be in a continued proportion?

- Ans**
- 1. 5
 - 2. 4
 - 3. 3
 - 4. 2

Question ID : 65497832210
Status : Answered
Chosen Option : 3

Q.17 By selling 40 dozen bananas for ₹1,440, a man gains 20%. In order to gain 30%, for how much should he sell 20 dozen bananas?

- Ans**
- 1. ₹780
 - 2. ₹1,560
 - 3. ₹936
 - 4. ₹720

Question ID : 65497832199
Status : Answered
Chosen Option : 1

Q.18 The amount obtained by investing a certain sum at $r\%$ p.a. for 3 years at simple interest is equal to the simple interest on the same sum at the same rate for 19 years. What is the value of r ?

- Ans
- 1. 6.25
 - 2. 5.75
 - 3. 4
 - 4. 8

Question ID : 65497832208
Status : Answered
Chosen Option : 1

Q.19 If the selling price of an article is ₹900 and the discount is 40%, then find its marked price (in ₹).

- Ans
- 1. 1,200
 - 2. 1,500
 - 3. 1,600
 - 4. 800

Question ID : 65497832213
Status : Answered
Chosen Option : 2

Q.20 The area of the floor of a cubical room is 192 m^2 . The length of the longest rod that can be kept in that room is:

- Ans
- 1. 18 m
 - 2. 22 m
 - 3. 24 m
 - 4. 26 m

Question ID : 65497832211
Status : Answered
Chosen Option : 3

Q.21 The average weight of 6 persons increases by 1.5 kg when a new person comes in place of one of them who was weighing 65 kg. What is the weight of the new person?

- Ans
- 1. 66.5 kg
 - 2. 74 kg
 - 3. 76 kg
 - 4. 75.5 kg

Question ID : 65497832212
Status : Answered
Chosen Option : 2

Q.22 Pipes A and B can empty a full tank in 16 hours and 24 hours, respectively. Pipe C alone can fill the empty tank in 4 hours. If A, B and C are opened together, the tank will be 35% full after:

- Ans
- 1. $3\frac{1}{5}$ hours
 - 2. $3\frac{2}{5}$ hours
 - 3. $2\frac{2}{5}$ hours
 - 4. $2\frac{1}{5}$ hours

Question ID : 65497832223
Status : Answered
Chosen Option : 3

Q.23 Simplify the following expression.

$$\frac{312 \div 26 + 60 \div (42 - 55 \text{ of } 4 \div 10) \times 2}{9 + (12 - 2 \text{ of } 4)}$$

- Ans
- 1. $\frac{6}{169}$
 - 2. $1\frac{1}{26}$
 - 3. $-\frac{144}{169}$
 - 4. $1\frac{5}{13}$

Question ID : 65497832201
Status : Answered
Chosen Option : 4

Q.24 A trader purchased 360 packets of pencils at the rate of ₹15 per packet. He sold 60% of the packets at the rate of ₹18 per packet and the remaining packets at the rate of ₹20 per packet. What is his gain per cent (up to one decimal place) in this transaction?

- Ans
- 1. 25.5
 - 2. 25.3
 - 3. 25.2
 - 4. 25.4

Question ID : 65497832217
Status : Answered
Chosen Option : 2

Q.25 Two successive discounts, with the first being 10%, were given on an article having the marked price of ₹7,500. Finally, it was sold for ₹5,805. What per cent was the second discount?

- Ans
- 1. 12%
 - 2. 15%
 - 3. 16%
 - 4. 14%

Question ID : 65497832209
Status : Answered
Chosen Option : 4

Q.1 The following sentence has been divided into parts. One of them may contain an error. Select the part that contains the error from the given options. If you don't find any error, mark 'No error' as your answer.

Please let me know / whether you decide / to come with me.

- Ans
- 1. to come with me
 - 2. Please let me know
 - 3. whether you decide
 - 4. No error

Question ID : 65497832224
Status : Answered
Chosen Option : 3

Q.2 Select the most appropriate option to fill in the blank.

His condition was so critical that a senior doctor _____ performed the operation.

- Ans
- 1. yourself
 - 2. myself
 - 3. itself
 - 4. himself

Question ID : 65497832234
Status : Answered
Chosen Option : 4

Q.3 Select the most appropriate ANTONYM of the given word.

Detest

- Ans
- 1. Abhor
 - 2. Adore
 - 3. Reject
 - 4. Hate

Question ID : 65497832225
Status : Answered
Chosen Option : 2

Q.4 Select the most appropriate synonym of the given word.

Cruel

- Ans
- 1. Polite
 - 2. Easy
 - 3. Mild
 - 4. Brutal

Question ID : 65497832229
Status : Answered
Chosen Option : 4

Q.5 Select the option that can be used as a one-word substitute for the given group of words.

A large number of fish swimming together

- Ans
- 1. Gaggle
 - 2. Herd
 - 3. Pride
 - 4. Shoal

Question ID : 65497832243
Status : Answered
Chosen Option : 1

Q.6 Select the most appropriate ANTONYM of the given word.

Hesitate

- Ans
- 1. Falter
 - 2. Advance
 - 3. Delay
 - 4. Waver

Question ID : 65497832237
Status : Answered
Chosen Option : 2

Q.7 Select the INCORRECTLY spelt word.

- Ans
- 1. Robbery
 - 2. Rotten
 - 3. Rotate
 - 4. Round

Question ID : 65497832227
Status : Answered
Chosen Option : 1

Q.8 Select the most appropriate option that can substitute the underlined segment in the given sentence. If there is no need to substitute it, select 'No substitution required'.

The old man was too weak that he couldn't climb the stairs.

- Ans
- 1. so weak to
 - 2. No substitution required
 - 3. very weak to
 - 4. too weak to

Question ID : 65497832239
Status : Answered
Chosen Option : 4

Q.9 Select the most appropriate option to fill in the blank.

Music is helpful in improving the _____ of students.

- Ans
- 1. attraction
 - 2. concentration
 - 3. transfiguration
 - 4. solution

Question ID : 65497832231
Status : Answered
Chosen Option : 2

Q.10 Select the option that can be used as a one-word substitute for the given group of words.

Break or fall apart into small fragments in the process of deterioration

- Ans
- 1. Collapse
 - 2. Slump
 - 3. Sag
 - 4. Crumble

Question ID : 65497832226
Status : Answered
Chosen Option : 1

Q.11 Select the most appropriate synonym of the given word.

Plead

- Ans
- 1. Request
 - 2. Repeat
 - 3. Refuse
 - 4. Reply

Question ID : 65497832242
Status : Answered
Chosen Option : 1

Q.12 The following sentence has been split into four segments. Identify the segment that contains a grammatical error.

Shilpi has / a keen interest / of learning / a foreign language.

- Ans
- 1. a foreign language
 - 2. of learning
 - 3. a keen interest
 - 4. Shilpi has

Question ID : 65497832241
Status : Answered
Chosen Option : 2

Q.13 Select the most appropriate option that can substitute the underlined segment in the given sentence. If there is no need to substitute it, select 'No substitution required'.

The inmates of the house are sleep when the thief entered.

- Ans
- 1. No substitution required
 - 2. were sleep
 - 3. are sleeping
 - 4. were sleeping

Question ID : 65497832230
Status : Answered
Chosen Option : 4

Q.14 Select the most appropriate meaning of the given idiom.

To break new ground

- Ans
- 1. To look for a new building
 - 2. To innovate or pioneer
 - 3. To disturb or interrupt
 - 4. To start digging somewhere else

Question ID : 65497832236
Status : Answered
Chosen Option : 2

Q.15 Select the correctly spelt word.

- Ans
- 1. Precipitation
 - 2. Labaling
 - 3. Procedure
 - 4. Precoutions

Question ID : 65497832233
Status : Answered
Chosen Option : 3

Q.16 Select the option that can be used as a substitute for the given group of words.

Hair of animals, which is soft and used for making wool

- Ans
- 1. Bristles
 - 2. Kenosis
 - 3. Fur
 - 4. Grizzly hair

Question ID : 65497832235
Status : Answered
Chosen Option : 3

Q.17 Select the most appropriate meaning of the given idiom.

To break into tears

- Ans 1. To cry suddenly
 2. To fidget
 3. To panic
 4. To be afraid of

Question ID : 65497832232

Status : Answered

Chosen Option : 1

Q.18 Select the most appropriate option that can substitute the underlined segment in the given sentence. If there is no need to substitute it, select 'No substitution required'.

Molly Yvonne didn't know what to do. She was torn apart with conflicting emotions.

- Ans 1. For
 2. In
 3. No substitution required
 4. By

Question ID : 65497832240

Status : Answered

Chosen Option : 4

Q.19 The following sentence has been divided into parts. One of them may contain an error. Select the part that contains the error from the given options. If you don't find any error, mark 'No error' as your answer.

Kavya didn't wanted / any help / in painting.

- Ans 1. Kavya didn't wanted
 2. in painting
 3. any help
 4. No error

Question ID : 65497832228

Status : Answered

Chosen Option : 1

Q.20 Select the most appropriate option to fill in the blank.

The teacher asked us to write our answers _____.

- Ans 1. laudably
 2. latently
 3. legibly
 4. laughably

Question ID : 65497832238

Status : Answered

Chosen Option : 3

Comprehension:

In the following passage, some words have been deleted. Read the passage carefully and select the most appropriate option to fill in each blank.

Once, a man and his son were going into town. (1) _____ wanted to sell some potatoes. They went with (2) _____ donkey, and the donkey (3) _____ the potatoes. While they walked, (4) _____ man came past on a horse. "Shame (5) _____ you!" he said. "Why do you have a donkey, but you don't ride it?"

SubQuestion No : 21

Q.21 Select the most appropriate option to fill in blank number 1.

Ans 1. They

2. He

3. Who

4. It

Question ID : 65497832245

Status : Answered

Chosen Option : 1

Comprehension:

In the following passage, some words have been deleted. Read the passage carefully and select the most appropriate option to fill in each blank.

Once, a man and his son were going into town. (1) _____ wanted to sell some potatoes. They went with (2) _____ donkey, and the donkey (3) _____ the potatoes. While they walked, (4) _____ man came past on a horse. "Shame (5) _____ you!" he said. "Why do you have a donkey, but you don't ride it?"

SubQuestion No : 22

Q.22 Select the most appropriate option to fill in blank number 2.

Ans 1. one

2. own

3. his

4. their

Question ID : 65497832246

Status : Answered

Chosen Option : 4

Comprehension:

In the following passage, some words have been deleted. Read the passage carefully and select the most appropriate option to fill in each blank.

Once, a man and his son were going into town. (1) _____ wanted to sell some potatoes. They went with (2) _____ donkey, and the donkey (3) _____ the potatoes. While they walked, (4) _____ man came past on a horse. "Shame (5) _____ you!" he said. "Why do you have a donkey, but you don't ride it?"

SubQuestion No : 23

Q.23 Select the most appropriate option to fill in blank number 3.

Ans 1. weighed

2. carried

3. sold

4. loaded

Question ID : 65497832247

Status : Answered

Chosen Option : 2

Comprehension:

In the following passage, some words have been deleted. Read the passage carefully and select the most appropriate option to fill in each blank.

Once, a man and his son were going into town. (1) _____ wanted to sell some potatoes. They went with (2) _____ donkey, and the donkey (3) _____ the potatoes. While they walked, (4) _____ man came past on a horse. "Shame (5) _____ you!" he said. "Why do you have a donkey, but you don't ride it?"

SubQuestion No : 24

Q.24 Select the most appropriate option to fill in blank number 4.

- Ans 1. same
 2. some
 3. other
 4. a

Question ID : 65497832248

Status : Answered

Chosen Option : 4

Comprehension:

In the following passage, some words have been deleted. Read the passage carefully and select the most appropriate option to fill in each blank.

Once, a man and his son were going into town. (1) _____ wanted to sell some potatoes. They went with (2) _____ donkey, and the donkey (3) _____ the potatoes. While they walked, (4) _____ man came past on a horse. "Shame (5) _____ you!" he said. "Why do you have a donkey, but you don't ride it?"

SubQuestion No : 25

Q.25 Select the most appropriate option to fill in blank number 5.

- Ans 1. on
 2. at
 3. by
 4. for

Question ID : 65497832249

Status : Answered

Chosen Option : 1

Section : Part D Hindi

Q.1 सही वर्तनी वाले शब्द का चयन करें।

- Ans 1. इषालु
 2. इर्षालू
 3. ईर्षालु
 4. ईष्यालू

Question ID : 65497832258

Status : Not Answered

Chosen Option : --

Q.2 रिक्त स्थान को भरने के लिए सबसे उपयुक्त शब्द का चयन करें।

पेड़ पर चिड़िया _____ है।

- Ans
- 1. टिटकारती
 - 2. कडकती
 - 3. चहचहाती
 - 4. हिनहिनाती

Question ID : 65497832256
Status : Not Answered
Chosen Option : --

Q.3 दिए गए वाक्य में रेखांकित खंड को प्रतिस्थापित करने के लिए सबसे उपयुक्त विकल्प का चयन करें।
यदि इसे प्रतिस्थापित करने की आवश्यकता नहीं है, तो विकल्प 'किसी बदलाव की आवश्यकता नहीं है'
का चयन करें।

असली भैंस का दूध बहुत मीठा होता है।

- Ans
- 1. किसी बदलाव की आवश्यकता नहीं है।
 - 2. भैंस का असली दूध
 - 3. गाय का दूध
 - 4. भैंस का दूध

Question ID : 65497832264
Status : Not Answered
Chosen Option : --

Q.4 'अधेर करना' मुहावरे का अर्थ बताइए।

- Ans
- 1. घमंड करना
 - 2. अन्याय करना
 - 3. अधेरा करना
 - 4. भ्रष्टाचार करना

Question ID : 65497832260
Status : Not Answered
Chosen Option : --

Q.5 'आदर और निरादर करना' यह अर्थ किस मुहावरे का है?

- Ans
- 1. पान-पत्ते तक सीमित होना
 - 2. पान-पनही खिलाना
 - 3. पान-फूल पर रहना
 - 4. पान-फूल-सा

Question ID : 65497832253
Status : Not Answered
Chosen Option : --

Q.6 'जो न जाना गया हो' वाक्यांश के लिए एक शब्द होगा-

- Ans
- 1. अनजान
 - 2. अतिथि
 - 3. ज्ञात
 - 4. अज्ञात

Question ID : 65497832266
Status : Not Answered
Chosen Option : --

Q.7 दिए गए वाक्य में रेखांकित खंड को प्रतिस्थापित करने के लिए सबसे उपयुक्त विकल्प का चयन करें। यदि इसे प्रतिस्थापित करने की आवश्यकता नहीं है, तो विकल्प 'किसी बदलाव की आवश्यकता नहीं है' का चयन करें।

अच्छे लड़के परिश्रमी होती हैं।

- Ans
- 1. होता है।
 - 2. होती है।
 - 3. होते हैं।
 - 4. किसी बदलाव की आवश्यकता नहीं है।

Question ID : 65497832255

Status : Not Answered

Chosen Option : --

Q.8 दिए गए शब्द के समानार्थी शब्द का चयन करें।

इंद्र

- Ans
- 1. ईश्वर
 - 2. देवराज
 - 3. भगवान
 - 4. यक्षराज

Question ID : 65497832263

Status : Not Answered

Chosen Option : --

Q.9 दिए गए वाक्य का वह भाग ज्ञात करें जिसमें कोई त्रुटि है। यदि कोई त्रुटि नहीं है, तो 'कोई त्रुटि नहीं है' चुनें।

अन्य वर्ष के (1)/ समान इस वर्ष भी (2)/ फसल अच्छी रही। (3)/ कोई त्रुटि नहीं है (4)

- Ans
- 1. 1
 - 2. 4
 - 3. 3
 - 4. 2

Question ID : 65497832250

Status : Not Answered

Chosen Option : --

Q.10 दिए गए वाक्य में रेखांकित खंड को प्रतिस्थापित करने के लिए सबसे उपयुक्त विकल्प का चयन करें। यदि इसे प्रतिस्थापित करने की आवश्यकता नहीं है, तो विकल्प 'किसी बदलाव की आवश्यकता नहीं है' का चयन करें।

वह मुझे अनन्तकाल से नहीं मिला।

- Ans
- 1. पुरातन काल से
 - 2. प्राचीन काल में
 - 3. चिरकाल से
 - 4. किसी बदलाव की आवश्यकता नहीं है।

Question ID : 65497832261

Status : Not Answered

Chosen Option : --

Q.11 रिक्त स्थान को भरने के लिए सबसे उपयुक्त शब्द का चयन करें।

परिवर्तन _____ का नियम है।

- Ans
- 1. सस्कृति
 - 2. जगत
 - 3. प्रकृति
 - 4. पृथ्वी

Question ID : 65497832259
Status : Not Answered
Chosen Option : --

Q.12 'दोपहर के बाद का समय' वाक्यांश के लिए एक शब्द होगा-

- Ans
- 1. अपराह्न
 - 2. गोधूलि
 - 3. मध्याह्न
 - 4. पूर्वाह्न

Question ID : 65497832269
Status : Not Answered
Chosen Option : --

Q.13 कौनसा विलोम युग्म सुमेलित नहीं है?

- Ans
- 1. अगीकार-स्वीकार
 - 2. अधम-उत्तम
 - 3. अवनत-उन्नत
 - 4. अकाम-सकाम

Question ID : 65497832252
Status : Not Answered
Chosen Option : --

Q.14 दिए गए शब्द के समानार्थी शब्द का चयन कीजिए।

चुरगी

- Ans
- 1. घुड़सवार
 - 2. घुड़सार
 - 3. घुड़साल
 - 4. अस्तबल

Question ID : 65497832251
Status : Not Answered
Chosen Option : --

Q.15 दिए गए वाक्य का वह भाग ज्ञात करें जिसमें कोई त्रुटि है। यदि कोई त्रुटि नहीं है, तो 'कोई त्रुटि नहीं है' चुनें।

प्रस्तुत पक्तियाँ (1)/ कामायनी से (2)/ ली हैं। (3)/ कोई त्रुटि नहीं है। (4)

- Ans
- 1. 4
 - 2. 3
 - 3. 2
 - 4. 1

Question ID : 65497832262
Status : Not Answered
Chosen Option : --

Q.16 सही वर्तनी वाले शब्द का चयन करें।

- Ans
- 1. अदितीत
 - 2. अद्वितिय
 - 3. अद्वितीय
 - 4. अदुतीय

Question ID : 65497832257
Status : Not Answered
Chosen Option : --

Q.17 दिये गये वाक्य के किस भाग में त्रुटि है?

कवि ने प्रकृति की सुदर शोभा का वर्णन किया है।

- Ans
- 1. सुदर शोभा का
 - 2. वर्णन किया है।
 - 3. कवि ने
 - 4. प्रकृति की

Question ID : 65497832267
Status : Not Answered
Chosen Option : --

Q.18 दिये गये वाक्यांश के लिए एक सार्थक शब्द दीजिए।

जिसकी जीविका निश्चित न हो

- Ans
- 1. खेचर
 - 2. अगोचर
 - 3. आत्मघाती
 - 4. आकाशवृि

Question ID : 65497832254
Status : Not Answered
Chosen Option : --

Q.19 नीचे दिए वाक्य में रिक्त-स्थान भरने के लिए सबसे उपयुक्त शब्द का चयन करें।

बरगद _____ हहरा रहा था।

- Ans
- 1. साय-साय
 - 2. हर-हर
 - 3. झाँप-झाँप
 - 4. सर-सर

Question ID : 65497832265
Status : Not Answered
Chosen Option : --

Q.20 'उग्र' का विलोम शब्द होगा-

- Ans
- 1. प्रखर
 - 2. सरल
 - 3. सौम्य
 - 4. कठोर

Question ID : 65497832268
Status : Not Answered
Chosen Option : --

Comprehension:

मनुष्य शारीरिक कष्ट से ही पीछे हटने वाला (1) _____ नहीं है। मानसिक क्लेश की सभावना से भी बहुत-से कर्मों की ओर प्रवृत्त होने का (2) _____ उसे नहीं होता। जिन बातों से समाज के बीच उपहास, निंदा, (3) _____ इत्यादि का भय रहता है, उन्हें अच्छी और कल्याणकारिणी समझते हुए भी बहुत से लोग उनसे दूर रहते हैं। (4) _____ हानि देखते हुए भी कुछ प्रथाओं का अनुसरण बड़े-बड़े समझदार तक इसलिए करते चलते हैं कि उनके त्याग से वे बुरे कहे जाएँगे; लोगो में उनका वैसा आदर - सम्मान न रह जाएगा। उसके लिए मान - ग्लानि का कष्ट सब शारीरिक (5) _____ से बढ़कर होता है।

निम्न प्रश्नों के उत्तर उपरोक्त गद्यांश के आधार पर दीजिए।

SubQuestion No : 21

Q.21 गद्यांश के रिक्त स्थान (1) के लिए सर्वाधिक उपयुक्त शब्द होगा-

- Ans
- 1. नभचर
 - 2. जलचर
 - 3. प्राणी
 - 4. जानवर

Question ID : 65497832271

Status : Not Answered

Chosen Option : --

Comprehension:

मनुष्य शारीरिक कष्ट से ही पीछे हटने वाला (1) _____ नहीं है। मानसिक क्लेश की सभावना से भी बहुत-से कर्मों की ओर प्रवृत्त होने का (2) _____ उसे नहीं होता। जिन बातों से समाज के बीच उपहास, निंदा, (3) _____ इत्यादि का भय रहता है, उन्हें अच्छी और कल्याणकारिणी समझते हुए भी बहुत से लोग उनसे दूर रहते हैं। (4) _____ हानि देखते हुए भी कुछ प्रथाओं का अनुसरण बड़े-बड़े समझदार तक इसलिए करते चलते हैं कि उनके त्याग से वे बुरे कहे जाएँगे; लोगो में उनका वैसा आदर - सम्मान न रह जाएगा। उसके लिए मान - ग्लानि का कष्ट सब शारीरिक (5) _____ से बढ़कर होता है।

निम्न प्रश्नों के उत्तर उपरोक्त गद्यांश के आधार पर दीजिए।

SubQuestion No : 22

Q.22 गद्यांश के रिक्त स्थान (2) के लिए सर्वाधिक उपयुक्त शब्द होगा-

- Ans
- 1. दुस्साहस
 - 2. साहस
 - 3. हिम्मत
 - 4. प्रयास

Question ID : 65497832272

Status : Not Answered

Chosen Option : --

Comprehension:

मनुष्य शारीरिक कष्ट से ही पीछे हटने वाला (1) _____ नहीं है। मानसिक क्लेश की सभावना से भी बहुत-से कर्मों की ओर प्रवृत्त होने का (2) _____ उसे नहीं होता। जिन बातों से समाज के बीच उपहास, निंदा, (3) _____ इत्यादि का भय रहता है, उन्हें अच्छी और कल्याणकारिणी समझते हुए भी बहुत से लोग उनसे दूर रहते हैं। (4) _____ हानि देखते हुए भी कुछ प्रथाओं का अनुसरण बड़े-बड़े समझदार तक इसलिए करते चलते हैं कि उनके त्याग से वे बुरे कहे जाएँगे; लोगो में उनका वैसा आदर - सम्मान न रह जाएगा। उसके लिए मान - ग्लानि का कष्ट सब शारीरिक (5) _____ से बढ़कर होता है।

निम्न प्रश्नों के उत्तर उपरोक्त गद्यांश के आधार पर दीजिए।

SubQuestion No : 23

Q.23 गद्यांश के रिक्त स्थान (3) के लिए सर्वाधिक उपयुक्त शब्द होगा-

- Ans
- 1. यश
 - 2. अपमान
 - 3. सम्मान
 - 4. स्तुति

Question ID : 65497832273

Status : Not Answered

Chosen Option : --

Comprehension:

मनुष्य शारीरिक कष्ट से ही पीछे हटने वाला (1) _____ नहीं है। मानसिक क्लेश की सभावना से भी बहुत-से कर्मों की ओर प्रवृत्त होने का (2) _____ उसे नहीं होता। जिन बातों से समाज के बीच उपहास, निंदा, (3) _____ इत्यादि का भय रहता है, उन्हें अच्छी और कल्याणकारिणी समझते हुए भी बहुत से लोग उनसे दूर रहते हैं। (4) _____ हानि देखते हुए भी कुछ प्रथाओं का अनुसरण बड़े-बड़े समझदार तक इसलिए करते चलते हैं कि उनके त्याग से वे बुरे कहे जाएँगे; लोगों में उनका वैसा आदर - सम्मान न रह जाएगा। उसके लिए मान - ग्लानि का कष्ट सब शारीरिक (5) _____ से बढ़कर होता है।

निम्न प्रश्नों के उत्तर उपरोक्त गद्यांश के आधार पर दीजिए।

SubQuestion No : 24

Q.24 गद्यांश के रिक्त स्थान (4) के लिए सर्वाधिक उपयुक्त शब्द होगा-

- Ans
- 1. भयकर
 - 2. परोक्ष
 - 3. भीषण
 - 4. प्रत्यक्ष

Question ID : 65497832274

Status : Not Answered

Chosen Option : --

Comprehension:

मनुष्य शारीरिक कष्ट से ही पीछे हटने वाला (1) _____ नहीं है। मानसिक क्लेश की सभावना से भी बहुत-से कर्मों की ओर प्रवृत्त होने का (2) _____ उसे नहीं होता। जिन बातों से समाज के बीच उपहास, निंदा, (3) _____ इत्यादि का भय रहता है, उन्हें अच्छी और कल्याणकारिणी समझते हुए भी बहुत से लोग उनसे दूर रहते हैं। (4) _____ हानि देखते हुए भी कुछ प्रथाओं का अनुसरण बड़े-बड़े समझदार तक इसलिए करते चलते हैं कि उनके त्याग से वे बुरे कहे जाएँगे; लोगों में उनका वैसा आदर - सम्मान न रह जाएगा। उसके लिए मान - ग्लानि का कष्ट सब शारीरिक (5) _____ से बढ़कर होता है।

निम्न प्रश्नों के उत्तर उपरोक्त गद्यांश के आधार पर दीजिए।

SubQuestion No : 25

Q.25 गद्यांश के रिक्त स्थान (5) के लिए सर्वाधिक उपयुक्त शब्द होगा-

- Ans
- 1. क्लेशो
 - 2. सुखो
 - 3. अगो
 - 4. अपराधो

Question ID : 65497832275

Status : Not Answered

Chosen Option : --