

Constable (GD) in CAPFs, NIA, SSF and Rifleman (GD) in Assam Rifles Examination, 2018

Roll No. :	
Registration No.	
Name :	
Exam Venue :	iON Digital Zone iDZ Attingal
Exam Time :	9:00 AM - 10:30 AM
Exam Date :	18/02/2019

Section : General Section

Q.1 Find out the two signs to be interchanged to make the following equation correct.

$$10 + 10 \times 10 - 10 \div 10 = -89$$

- Ans
- 1. - and \times
 - 2. \times and \div
 - 3. + and \times
 - 4. - and \div

Question ID : 9895803716
Chosen Option : 2

Q.2

The statements below are followed by two conclusions labeled I and II. Assuming that the information in the statements is true, even if it appears at variance with generally established facts, decide which conclusion(s) logically and definitely follow(s) from the information given in the statements.

Statements:

- 1.) All owls are horses.
- 2.) Some horses are hares.

Conclusions:

- I. Some owls are hares.

- Ans
- 1. Only conclusion II follows.
 - 2. Neither conclusion I nor conclusion II follows.
 - 3. Both conclusions follow.
 - 4. Only conclusion I follows.

Question ID : 9895803710
Chosen Option : 1

Q.3

Select the option that will correctly replace the question mark (?) in the series.

- Ans
- 1. 111
 - 2. 105
 - 3. 95
 - 4. 125

Question ID : 9895803712
Chosen Option : 2

Q.4 The statements below are followed by two conclusions labeled I and II. Assuming that the information in the statements is true, even if it appears at variance with generally established facts, decide which conclusion(s) logically and definitely follow(s) from the information given in the statements.

Statements:

- 1.) All pens are frogs.
- 2.) Some crows are frogs.

Conclusions

- I. No pen is a crow.
- II. Some pens are crows.

- Ans** 1. Either conclusion I or conclusion II follows.
 2. Only conclusion II follows.
 3. Both conclusions follow.
 4. Only conclusion I follows.

Question ID : 9895803709
Chosen Option : 2

Q.5 Select the option that will correctly replace the question mark (?) in the series.





112, 108, 92, 56, ?

- Ans** 1. -8
 2. -7
 3. -6
 4. 7

Question ID : 9895803711
Chosen Option : 1

Q.6 Choose the option in which the figure marked 'X' is embedded. (Rotation is not allowed)



- Ans** 1. 
 2. 
 3. 
 4. 

Question ID : 9895803719
Chosen Option : 3

Q.7 Choose the odd one out of the given options.

- Ans 1. CEK
 2. AHI
 3. DFH
 4. CFI

Question ID : 9895803699
 Chosen Option : 3

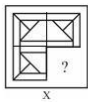
Q.8 Select the option that will correctly replace the question mark (?) in the series.

SHO, QJN, OLM, ?

- Ans 1. LWV
 2. LWL
 3. MNL
 4. MML

Question ID : 9895803698
 Chosen Option : 3

Q.9 Select a figure from amongst the four alternatives that when placed in the blank space (?) of figure X will complete the pattern. (Rotation is not allowed).



- Ans 1.
- 2.
- 3.
- 4.

Question ID : 9895803718
 Chosen Option : 4

Q.1 Select the option that is related to the third number in the same way as the second number is related to the first number.
 0

22 : 88 :: 37 : ?

- Ans 1. 221
 2. 144
 3. 169
 4. 370

Question ID : 9895803713
 Chosen Option : 2

Q.1 Eight friends A, B, C, D, E, F, G and H are sitting around a circular table facing each other for a lunch. A is opposite D and third to the right of B. G is between A and F. H is to the right of A. E is between C and D. Who is sitting between B and E?

Ans

- 1. D
- 2. E
- 3. F
- 4. C

Question ID : 9895803707
Chosen Option : 2

Q.1 Seven friends O, P, Q, R, S, T and U are watching a movie sitting in a row. P is sitting at one extreme end. Q is sitting to the immediate left of S. P is sitting second to the right of T. U is not sitting at any extreme end. O is sitting between R and T. Who is sitting between Q and R?

- Ans
- 1. Q
 - 2. T
 - 3. R
 - 4. S

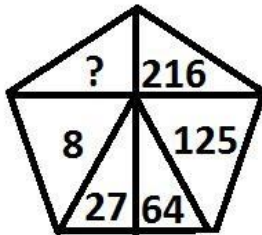
Question ID : 9895803706
Chosen Option : 4

Q.1 Select the option that is related to the third term in the same way as the second term is related to the first term.
3
Ichthyology: Fishes :: Pedology : ?

- Ans
- 1. Shells
 - 2. Names
 - 3. Soil
 - 4. Moon

Question ID : 9895803701
Chosen Option : 3

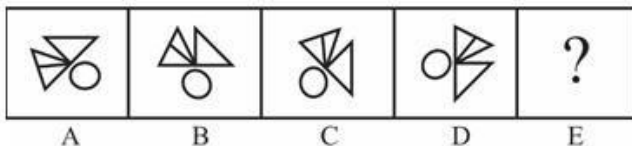
Q.1 Select the option that will correctly replace the question mark (?) in the given pattern.
4



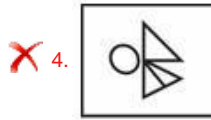
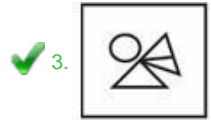
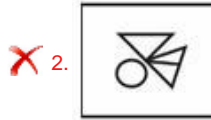
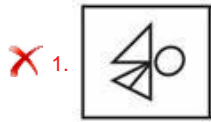
- Ans
- 1. 343
 - 2. 7
 - 3. 37
 - 4. 49

Question ID : 9895803715
Chosen Option : 2

Q.1 Choose the option that would follow next in the given figure series.
5



Ans

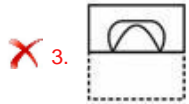
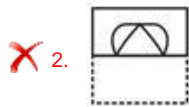
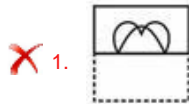


Question ID : 9895803717
Chosen Option : 3

Q.1 A square transparent sheet with a pattern is given. How will the pattern appear when the transparent sheet is folded along the dotted line?



Ans



Question ID : 9895803721
Chosen Option : 4

Q.1 J, K, L, M, N and O are six teachers. Each one teaches a different subject out of Hindi, English, Math, Science, Social Science and Arts, not necessarily in the same order. Each of them teaches on only one day, from Monday to Saturday, not necessarily in the same order.

J teaches Science on Wednesday. O teaches Math second after J. K teaches on the first day of the week, but teaches neither Hindi nor English. M teaches English before N and L teaches Arts before J. Who teaches on Tuesday?

- Ans
- 1. M
 - 2. K
 - 3. L
 - 4. N

Question ID : 9895803708
Chosen Option : 3

8 Choose the option that most closely resembles the mirror image of the given figure when mirror is placed at the right side.



Ans

✓ 1.



✗ 2.



✗ 3.



✗ 4.



Question ID : 9895803720
Chosen Option : 1

Q.1 In a certain code, POTATO is written as AOOPTT. How will BARBER be written in that code?
9

Ans

✓ 1. ABBERR

✗ 2. ABBRER

✗ 3. ARBERB

✗ 4. ABRBER

Question ID : 9895803704
Chosen Option : 1

Q.2 Choose the odd number out of the given options.
0

Ans

✗ 1. 97

✗ 2. 89

✗ 3. 83

✓ 4. 63

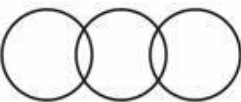
Question ID : 9895803714
Chosen Option : 4

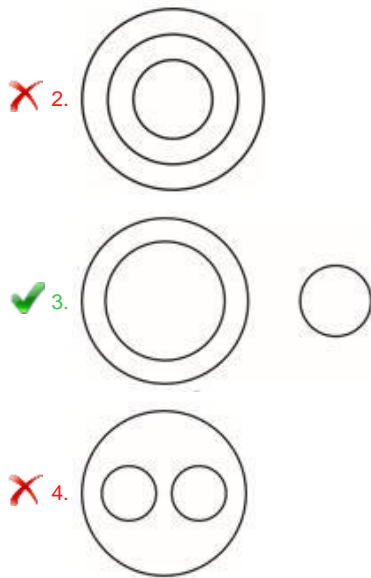
Q.2 Select the Venn diagram that best represents the given set of classes.
1

Wheat, Crops, Farmers

Ans

✗ 1.





Question ID : 9895803722
Chosen Option : 1

Q.2 Choose the odd one out of the given options.
2

- Ans 1. Yellow
 2. Pink
 3. Purple
 4. Orange

Question ID : 9895803700
Chosen Option : 2

Q.2 Select the option that is related to the third term in the same way as the second term is related to the first term.
3

Achieve: Fail :: Gloomy : ?

- Ans 1. Chalk
 2. Chant
 3. Chase
 4. Cheerful

Question ID : 9895803702
Chosen Option : 1

Q.2 Select the option that is related to the third term in the same way as the second term is related to the first term.
4

BFH : DHJ :: GKM : ?

- Ans 1. MKI
 2. IMO
 3. KMG
 4. MKG

Question ID : 9895803703
Chosen Option : 2

Q.2 In a certain code, SAW is written as 38. How will FEED be written in that code?
5

- Ans 1. 70
 2. 45

✓ 3. 88

✗ 4. 30

Question ID : 9895803705

Chosen Option : 1

Q.2
6 Which articles of the Indian Constitution cover the fundamental right against exploitation?

Ans ✗ 1. Articles 29-30

✗ 2. Articles 19-22

✗ 3. Articles 14-18

✓ 4. Articles 23-24

Question ID : 9895805348

Chosen Option : 3

Q.2
7 Where and against which country did Sachin Tendulkar score his 100th century?

Ans 1. Perth stadium, against West Indies

2. Shere Bangla stadium, against Bangladesh

3. Eden park, against New Zealand

4. Sydney cricket ground, against Australia

Question ID : 9895805355

Chosen Option : 2

Q.2
8 In which state is Kaziranga National Park situated?

Ans ✓ 1. Assam

2. Madhya Pradesh

3. Rajasthan

✗ 4. Bihar

Question ID : 9895805339

Chosen Option : 1

Q.2
9 Which of these languages is declared 'classical' by the Government of India?

Ans ✗ 1. Marathi

✗ 2. Hindi

✓ 3. Odia

✗ 4. Pali

Question ID : 9895805335

Chosen Option : 2

Q.3
0 Arrange the following events in correct chronology:

- 1) Champaran Satyagraha against indigo plantation
- 2) Starting of non-cooperation Khilafat movement
- 3) Rowlatt Satyagraha
- 4) Arrival of Simon commission in India

- Ans 1. 1-3-2-4
 2. 3-4-2-1
 3. 4-2-1-3
 4. 1-2-3-4

Question ID : 9895805342
Chosen Option : 2

Q.3
1 What was the amendment done to the Indian Constitution by 52nd amendment done in 1985?

- Ans 1. Anti-defection law was included
 2. Amendment to the Union and State lists with respect to raising of taxes
 3. The words 'socialist secular' added to the preamble
 4. Formation of Sikkim as a state within the Indian Union

Question ID : 9895805341
Chosen Option : 4

Q.3
2 The Mettur dam is built on which river and is in which state?

- Ans 1. Tungabhadra river, Karnataka
 2. Kali river, Karnataka
 3. Kaveri river, Tamilnadu
 4. Narmada river, Madhya Pradesh

Question ID : 9895805344
Chosen Option : 4

Q.3
3 Which of these personalities is popularly known as the 'father of the Indian film industry'?

- Ans 1. Amitabh Bachchan
 2. Dadasaheb Phalke
 3. Dev Anand
 4. Rajesh Khanna

Question ID : 9895805338
Chosen Option : 2

Q.3
4 The silver coin introduced by Sher Shah Suri was called:

- Ans 1. Tankah
 2. Rupiya
 3. Mohar
 4. Dinar

Question ID : 9895805345
Chosen Option : 3

Q.3
5 The Kani Shawl handicraft variety belongs to which of the following states of India?

- Ans 1.

- 2. Arunachal Pradesh
- 3. Himachal Pradesh
- 4. Uttar Pradesh

Question ID : 9895805358
Chosen Option : 3

Q.3
6 Which of the following is not a term associated with credit?

- Ans
- 1. Necessary documents
 - 2. Collateral
 - 3. Interest rate
 - 4. Stamp by finance minister

Question ID : 9895805354
Chosen Option : 3

Q.3
7 Which of the following competitions is not associated with Indian football?

- Ans
- 1. Ranji Trophy
 - 2. Federation Cup
 - 3. Santosh Trophy
 - 4. Durand Cup

Question ID : 9895805357
Chosen Option : 3

Q.3
8 Scurvy is caused by the deficiency of which vitamin?

- Ans
- 1. Vitamin C
 - 2. Vitamin A
 - 3. Vitamin D
 - 4. Vitamin K

Question ID : 9895805351
Chosen Option : 1

Q.3
9 In which Indian state is bamboo drip irrigation system a very old practice?

- Ans
- 1. Chattisgarh
 - 2. Meghalaya
 - 3. Telangana
 - 4. Maharashtra

Question ID : 9895805350
Chosen Option : 2

Q.4
0 Which is the highest quality hard coal of the below?

- Ans
- 1. Peat
 - 2. Lignite

3. Bituminous

4. Anthracite

Question ID : 9895805343
Chosen Option : 3

Q.4
1 The Treaty of Purandar was signed between:

- Ans
1. Afghans and Portuguese
 2. Nawab of Bengal and Rajputs
 3. Eastern Gangas and Cholas
 4. Mughals and Marathas

Question ID : 9895805337
Chosen Option : 3

Q.4
2 Which of the motions is passed in the parliament to remove the President of India?

- Ans
1. Impeachment Motion
 2. Censure Motion
 3. Cut Motion
 4. No Confidence Motion

Question ID : 9895805347
Chosen Option : 1

Q.4
3 Which of these is an organisation that promotes sustainable management and conservation of tropical forests?

- Ans
1. United Nations Forum on Forests
 2. Greenpeace
 3. World Wide Fund for Nature
 4. International Tropical Timber Organization

Question ID : 9895805340
Chosen Option : 3

Q.4
4 Which of the following issues currency notes in India?

- Ans
1. PNB
 2. RBI
 3. SBI
 4. ICICI

Question ID : 9895805353
Chosen Option : 2

Q.4
5 What is the neutral value of the pH scale?

- Ans
1. Equal to 14
 2. Less than 7
 3. Equal to 7
 4. Above 7

Question ID : 9895805349
Chosen Option : 4

Q.4
6 Bananas turn brown in colour because:

- Ans
1. an enzyme converts starch into sugar
 2. the air reacts with the enzymes in the banana
 3. Bisphosphonates reacts with the enzymes in the banana
 4. an enzyme converts sugar into starch

Question ID : 9895805356
Chosen Option : 1

Q.4
7 On which of the below can an excise duty charged?

- Ans
1. A company's revenue
 2. Export of goods and services
 3. Import of goods and services
 4. Goods manufactured

Question ID : 9895805352
Chosen Option : 2

Q.4
8 Who is the author of the book 'India's Export Trends and Prospects for Self-Sustained Growth'?

- Ans
1. Shashi Tharoor
 2. Manmohan Singh
 3. Atal Bihari Vajpayee
 4. Narendra Modi

Question ID : 9895805336
Chosen Option : 2

Q.4
9 In which Indian state is the Hornbill festival celebrated?

- Ans
1. Nagaland
 2. Manipur
 3. Sikkim
 4. Tripura

Question ID : 9895805346
Chosen Option : 2

Q.5
0 What is the name of Malala Yousafzai's biopic?

- Ans
1. The Aviator
 2. Frida
 3. The social network
 4. Gul Makai

Question ID : 9895805334

Q.5
1 What is the median of the given data?

2, 3, 2, 3, 6, 5, 4, 7

- Ans
- 1. 4
 - 2. 4.5
 - 3. 3.5
 - 4. 3

Question ID : 9895805646
Chosen Option : 1

Q.5
2 A sum becomes five times of itself in 8 years at simple interest. What is the rate of interest per annum?

- Ans
- 1. 37.5%
 - 2. 25%
 - 3. 62.5%
 - 4. 50%

Question ID : 9895805653
Chosen Option : 2

Q.5
3 The table given below shows the marks obtained by 4 students in 5 subjects. The maximum marks of each subject is 100.

Subjects	Students			
	P1	P2	P3	P4
S1	89	100	92	91
S2	62	52	72	37
S3	57	55	70	65
S4	76	85	76	58
S5	85	70	66	62

What is the difference in the average marks per student for subjects S5 and S2?

- Ans
- 1. 12
 - 2. 15
 - 3. 17.5
 - 4. 19.5

Question ID : 9895805663
Chosen Option : 3

Q.5
4 The length breadth and height of a cuboid are in the ratio 4 : 3 : 2. If the volume of cuboid is 1536 cm^3 , then what will be the total surface area of the cuboid?

- Ans
- 1. 868 cm^2
 - 2. 416 cm^2
 - 3. 624 cm^2
 - 4. 832 cm^2

Question ID : 9895805661
Chosen Option : 3

Q.5
5 The length, breadth and height of a solid cuboid is 20 cm, 16 cm and 12 cm respectively. If cuboid is melted to form identical cubes of side 4 cm, then what will be the number of identical cubes?

- Ans
- 1. 56
 - 2. 72
 - 3. 90

✓ 4. 60

Question ID : 9895805660
Chosen Option : 1

Q.5 A bike covers a certain distance at a speed of 56 km/hr in 16 hours. How much time it will take to cover the same
6 distance at the speed of 64 km/hr?

- Ans
- ✓ 1. 14 hr
 - ✗ 2. 18 hr
 - ✗ 3. 16 hr
 - ✗ 4. 12 hr

Question ID : 9895805658
Chosen Option : 4

Q.5 What is the value of $(3 \times 1500 \div 40 + 5 \div \frac{2}{7} \text{ of } 70)$?
7

- Ans
- ✗ 1. $\frac{433}{4}$
 - ✗ 2. $\frac{435}{4}$
 - ✓ 3. $\frac{451}{4}$
 - ✗ 4. $\frac{473}{4}$

Question ID : 9895805641
Chosen Option : 4

Q.5 Curved surface area of a cylinder is 110 cm^2 . If the height of cylinder is 5 cm, then what will be the diameter of its base?
8

- Ans
- ✗ 1. 14 cm
 - ✓ 2. 7 cm
 - ✗ 3. 3.5 cm
 - ✗ 4. 10.5 cm

Question ID : 9895805659
Chosen Option : 2

Q.5 Mohit and Sumit start a business with investment of ₹ 74000 and ₹ 96000 respectively. If at the end of the year they
9 earn profit in the ratio of 5 : 8, then what will be ratio of the time period for which they invest their money?

- Ans
- ✗ 1. 37 : 32
 - ✗ 2. 13 : 18
 - ✗ 3. 25 : 32
 - ✓ 4. 30 : 37

Question ID : 9895805652
Chosen Option : 4

Q.6 The value of discount of 18% on first article is equal to the value of discount of 13% on second article. What is the ratio
0 of the marked price of two articles?

- Ans
- ✗ 1. 17 : 24
 - ✗ 2. 39 : 50
 - ✓ 3. 13 : 18

4. 13 : 19

Question ID : 9895805645
Chosen Option : 1

Q.6
1 What will be the Highest Common Factor of 5, 10 and 20?

- Ans 1. 5
 2. 10
 3. 1
 4. 15

Question ID : 9895805640
Chosen Option : 1

Q.6
2 The average weight of 12 boxes is 63 kg. If four boxes having an average weight of 70 kg are removed, then what will be new average weight of the remaining boxes?

- Ans 1. 60 kg
 2. 59 kg
 3. 60.5 kg
 4. 59.5 kg

Question ID : 9895805643
Chosen Option : 2

Q.6
3 F alone can complete a work in 24 days and G alone can complete the same work in 32 days. F and G start the work together but G leaves the work 8 days before the completion of work. In how many days the total work will be completed?

- Ans 1. $\frac{130}{5}$ days
 2. $\frac{106}{7}$ days
 3. $\frac{114}{7}$ days
 4. $\frac{120}{7}$ days

Question ID : 9895805655
Chosen Option : 3

Q.6
4 Working 2 hours in a day, P can complete a work in 10 days and working 5 hours in a day, Q can complete the same work in 6 days. Working 3 hours in a day, in how many days both P and Q together can complete the same work?

- Ans 1. 3 days
 2. 6 days
 3. 4 days
 4. 5 days

Question ID : 9895805656
Chosen Option : 3

Q.6
5 Mohit purchases eggs at the rate of ₹ 3 per egg and sells them at the rate of ₹ 5 per egg. On selling 35 eggs, what will be the profit percentage?

- Ans 1. 33.33%
 2. 40%

3. 60%

4. 66.66%

Question ID : 9895805648

Chosen Option : 4

Q.6 A bag has white and yellow balls in the ratio 7 : 11 respectively. If the total number of balls is 108, then how many balls are yellow?
6

Ans 1. 66

2. 44

3. 64

4. 77

Question ID : 9895805650

Chosen Option : 1

Q.6 Varun purchases 75 articles for ₹ 3150 and sells them at a profit equal to the cost price of 15 articles. What will be the selling price of one article?
7

Ans 1. ₹ 42

2. ₹ 51.5

3. ₹ 50.4

4. ₹ 46.5

Question ID : 9895805649

Chosen Option : 1

Q.6 The average age of students is A and the average age of teachers is B . The number of the students is 45 times of the number of teachers. What is average age of students and teachers together?
8

Ans 1. $\frac{45A + 8B}{7}$

2. $\frac{45A + B}{46}$

3. $\frac{45A + B}{8}$

4. $\frac{45A + 4B}{23}$

Question ID : 9895805644

Chosen Option : 4

Q.6 The table given below shows the number of students enrolled in different courses of different colleges.
9

Colleges	Courses			
	B1	B2	B3	B4
C1	65	56	65	103
C2	68	58	71	112
C3	72	54	88	125
C4	76	52	75	120
C5	69	60	79	126

What is the difference in the total number of students enrolled in colleges C3 and C4?

Ans 1. 13

2. 11

3. 12

4. 16

Question ID : 9895805664

Chosen Option : 2

Q.7 0 Ram, Sita and Salma invest ₹ 16000, ₹ 22000 and ₹ 18000 respectively to start a business. If the profit at the end of the year is ₹ 26600, then what is share of Ram?

- Ans
- 1. ₹ 10450
 - 2. ₹ 8550
 - 3. ₹ 9650
 - 4. ₹ 7600

Question ID : 9895805651
Chosen Option : 2

Q.7 1 A student got 24% marks in an exam and he failed by 56 marks. If he got 60% marks, then his marks are 70 more than the minimum passing marks. What is the maximum marks for the exam?

- Ans
- 1. 350
 - 2. 260
 - 3. 380
 - 4. 280

Question ID : 9895805647
Chosen Option : 2

Q.7 2 What is the value of $75 \div 25 \text{ of } \left(\frac{4}{3} - \frac{1}{2} + \frac{1}{6}\right)$?

- Ans
- 1. $\frac{5}{6}$
 - 2. 3
 - 3. $\frac{7}{6}$
 - 4. 5

Question ID : 9895805642
Chosen Option : 2

Q.7 3 Raju travels at $\frac{3}{4}$ of his usual speed and reaches his office 24 minutes late than his usual time. If Raju travels at his usual speed, then what will be the time taken by him to reach his office?

- Ans
- 1. 64 minutes
 - 2. 72 minutes
 - 3. 48 minutes
 - 4. 56 minutes

Question ID : 9895805657
Chosen Option : 3

Q.7 4 Compound interest received on a sum in 5th year is ₹ 1200 (interest is compounded annually). If the rate of interest is 22.5% per annum, then what will be the interest in 6th year?

- Ans
- 1. ₹ 1470
 - 2. ₹ 1270
 - 3. ₹ 1200
 - 4. ₹ 270

Question ID : 9895805654
Chosen Option : 4

Q.7
5

The table given below shows the production of rice and the area under rice cultivation of a country for 5 consecutive years Y1, Y2, Y3, Y4 and Y5.

Year	Rice Production (in 1000 kg)	Area Under Rice Cultivation (in 100 square meter)
Y1	520	130
Y2	570	190
Y3	680	150
Y4	720	180
Y5	850	170

What is the yield per square meter for the year Y3?

- Ans
- 1. 37.66 kg
 - 2. 63.33 kg
 - 3. 45.33 kg
 - 4. 52.50 kg

Question ID : 9895805662
Chosen Option : 2

Section : English Language

Q.1 Select the most appropriate word to fill in the blank.

We should always remember not to _____ any problems and issues that may affect our career in any organisation.

- Ans
- 1. affect
 - 2. undertake
 - 3. inflict
 - 4. create

Question ID : 9895805202
Chosen Option : 4

Q.2 Select the most appropriate option to substitute the underlined segment in the given sentence. If there is no need to substitute it, select No Improvement.

After you will return from Bangalore, I will come and meet you.

- Ans
- 1. After you will be returning from
 - 2. No improvement
 - 3. After you returned from
 - 4. After you return from

Question ID : 9895805181
Chosen Option : 3

Q.3 Select the antonym of the given word

AWKWARD

- Ans
- 1. Problematic
 - 2. Convenient
 - 3. Difficult
 - 4. Matchless

Question ID : 9895805195
Chosen Option : 1

Comprehension:

In the following passage some words have been deleted. Fill in the blanks with the help of the alternatives given.

Seafood exports from India (1) _____ yet to gather momentum as (2) _____ prices, adverse weather conditions and (3) _____ continue to affect stocking of shrimps, which account for about three-fourths of the (4) _____ from export of marine products. This apart, seafood exporters are facing (5) _____ from the Seafood Import Monitoring Programme (SIMP) being implemented by the US and it is one of the largest buyers of Indian shrimps.

SubQuestion No : 4

Q.4 Select the most appropriate option that will fill in the blank number 1.

- Ans
- 1. be
 - 2. has
 - 3. are
 - 4. was

Question ID : 9895805187
Chosen Option : 2

Comprehension:

In the following passage some words have been deleted. Fill in the blanks with the help of the alternatives given.

Seafood exports from India (1) _____ yet to gather momentum as (2) _____ prices, adverse weather conditions and (3) _____ continue to affect stocking of shrimps, which account for about three-fourths of the (4) _____ from export of marine products. This apart, seafood exporters are facing (5) _____ from the Seafood Import Monitoring Programme (SIMP) being implemented by the US and it is one of the largest buyers of Indian shrimps.

SubQuestion No : 5

Q.5 Select the most appropriate option that will fill in the blank number 2.

- Ans
- 1. low
 - 2. little
 - 3. small
 - 4. high

Question ID : 9895805188
Chosen Option : 4

Comprehension:

In the following passage some words have been deleted. Fill in the blanks with the help of the alternatives given.

Seafood exports from India (1) _____ yet to gather momentum as (2) _____ prices, adverse weather conditions and (3) _____ continue to affect stocking of shrimps, which account for about three-fourths of the (4) _____ from export of marine products. This apart, seafood exporters are facing (5) _____ from the Seafood Import Monitoring Programme (SIMP) being implemented by the US and it is one of the largest buyers of Indian shrimps.

SubQuestion No : 6

Q.6 Select the most appropriate option that will fill in the blank number 3.

- Ans
- 1. diseases
 - 2. viruses
 - 3. bugs
 - 4. maladies

Question ID : 9895805189
Chosen Option : 1

Comprehension:

In the following passage some words have been deleted. Fill in the blanks with the help of the alternatives given.

Seafood exports from India (1) _____ yet to gather momentum as (2) _____ prices, adverse weather conditions and (3) _____ continue to affect stocking of shrimps, which account for about three-fourths of the (4) _____ from export of marine products. This apart, seafood exporters are facing (5) _____ from the Seafood Import Monitoring Programme (SIMP) being implemented by the US and it is one of the largest buyers of Indian shrimps.

SubQuestion No : 7

Q.7 Select the most appropriate option that will fill in the blank number 4.

- Ans
- 1. takings
 - 2. income
 - 3. cash
 - 4. revenue

Question ID : 9895805190
Chosen Option : 4

Comprehension:

In the following passage some words have been deleted. Fill in the blanks with the help of the alternatives given.

Seafood exports from India (1) _____ yet to gather momentum as (2) _____ prices, adverse weather conditions and (3) _____ continue to affect stocking of shrimps, which account for about three-fourths of the (4) _____ from export of marine products. This apart, seafood exporters are facing (5) _____ from the Seafood Import Monitoring Programme (SIMP) being implemented by the US and it is one of the largest buyers of Indian shrimps.

SubQuestion No : 8

Q.8 Select the most appropriate option that will fill in the blank number 5.

- Ans
- 1. rapture
 - 2. pleasure
 - 3. capture
 - 4. pressure

Question ID : 9895805191
Chosen Option : 2

Q.9 From the given options, identify the segment in the sentence which contains the grammatical error.

The government's interim budget from this financial year contained several measures which have the forthcoming elections in mind.

- Ans
- 1. from this financial year
 - 2. Government's interim budget
 - 3. which have the
 - 4. contained several measures

Question ID : 9895805179
Chosen Option : 2

Q.1 Select the most appropriate option to substitute the underlined segment in the given sentence. If there is no need to substitute it, select No Improvement.

While learning to drive, one of the most of important things is to know the traffic rules first.

- Ans
- 1. No improvement
 - 2. When learned to drive
 - 3. When learn driving
 - 4. When learn to drive

Question ID : 9895805182
Chosen Option : 4

Q.1 From the given options, identify the segment in the sentence which contains the grammatical error.

1

Soon after returning to office, the CBI chief transfer five officers.

- Ans
- 1. returning to office,
 - 2. the CBI chief
 - 3. transfer five officers
 - 4. Soon after

Question ID : 9895805178
Chosen Option : 2

Q.1
2 Select the correctly spelt word.

- Ans
- 1. Substitushion
 - 2. Substitution
 - 3. Substituition
 - 4. Sabstitution

Question ID : 9895805200
Chosen Option : 3

Q.1
3 Select the option that means the same as the given idiom.

To cut both ends

- Ans
- 1. To reject all arguments
 - 2. To argue in support of both sides
 - 3. To consider the truth and untruth
 - 4. To argue against both sides of an issue

Question ID : 9895805196
Chosen Option : 1

Q.1
4 Select the antonym of the given word.

EUPHORIA

- Ans
- 1. Folklore
 - 2. Lethargy
 - 3. Song
 - 4. Music

Question ID : 9895805194
Chosen Option : 4

Q.1
5 Select the correctly spelt word.

- Ans
- 1. Magnanemous
 - 2. Magnanomous
 - 3. Magnanimous
 - 4. Magnonimus

Question ID : 9895805201
Chosen Option : 1

Q.1
6 From the given options, identify the segment in the sentence which contains the grammatical error.

The Builders' Associations want GST exemption for government projects which have already proposed.

- Ans
- 1. which have already proposed.
 - 2. want GST exemption

- 3. for government projects
- 4. The Builders' Associations

Question ID : 9895805180
Chosen Option : 1

Q.1
7 Select the most appropriate option to fill in the blank.

Is it true that the students from the Space Research Centre _____ this evening?

- Ans
- 1. are arriving
 - 2. is arriving
 - 3. has arriving
 - 4. have arriving

Question ID : 9895805184
Chosen Option : 1

Q.1
8 Select the most appropriate option to substitute the underlined segment in the given sentence. If there is no need to substitute it, select No Improvement.

These flowers smell sweetly and are sold at high prices in the market.

- Ans
- 1. These flowers will smell sweetly
 - 2. These flowers smelt sweetly
 - 3. No improvement
 - 4. These flowers smell sweet

Question ID : 9895805183
Chosen Option : 4

Q.1
9 Select the word which means the same as the group of words given.

One who studies antique things

- Ans
- 1. Historian
 - 2. Sociologist
 - 3. Archaeologist
 - 4. Antiquarian

Question ID : 9895805199
Chosen Option : 3

Q.2
0 Select the synonym of the given word.

INCORRIGIBLE

- Ans
- 1. Reliable
 - 2. Unwise
 - 3. Intelligible
 - 4. Unalterable

Question ID : 9895805193
Chosen Option : 4

Q.2 Select the most appropriate word to fill in the blank.
1

Although I was _____ of his new plans for growth of the company, I relied on him as he was very honest.

- Ans
1. persuaded
 2. committed
 3. convinced
 4. sceptical

Question ID : 9895805203
Chosen Option : 1

Q.2 Select the word which means the same as the group of words given.
2

One who offers one's services without anything in return

- Ans
1. Volunteer
 2. Entrepreneur
 3. Businessman
 4. Investor

Question ID : 9895805198
Chosen Option : 3

Q.2 Select the synonym of the given word.
3

DISHEVELLED

- Ans
1. Unsafe
 2. Unclean
 3. Uncertain
 4. Untidy

Question ID : 9895805192
Chosen Option : 3

Q.2 Choose the correct meaning of the following idiom.
4

To get away with

- Ans
1. To escape from something
 2. To go away from home
 3. To finish an assignment
 4. To go to an unknown place

Question ID : 9895805197
Chosen Option : 1

Q.2 Select the most appropriate option to fill in the blank.
5

_____ example helps understand a concept better.

- Ans
1. Few

2. A
 3. An
 4. One

Question ID : 9895805185
Chosen Option : 3

Section : Hindi Language

Q.1 रिक्त स्थान को भरने के लिए उपयुक्त शब्द का चयन करें।

जो सदा रोता रहता है उसके चेहरे पर _____ होती है।

- Ans 1. खुशी
2. हँसी
3. उदासी
4. दुखी

Question ID : 9895805492
Chosen Option : --

Q.2 सही वर्तनी वाले शब्द का चयन करें।

- Ans 1. चिड़ीयाघर
2. चीड़ियाघर
3. चिड़ियाघर
4. चिड़ियघर

Question ID : 9895805509
Chosen Option : --

Q.3 दिए गए वाक्य में रेखांकित खंड को प्रतिस्थापित करने के लिए उपयुक्त विकल्प का चयन करें।

थोड़ी देर बाद हवा ने असर दिखाया और मन प्रसन्न हो गयी।

- Ans 1. मन प्रसन्न हो गए।
2. मनो प्रसन्न हो गए।
3. मन प्रसन्न हो गयीं।
4. मन प्रसन्न हो गया।

Question ID : 9895805489
Chosen Option : --

Q.4 दिए गए शब्द का विलोम चुनें।

संन्यास

- Ans 1. अतिथि
 2. बाहर
 3. गृहस्थ

4. सेवक

Question ID : 9895805501
Chosen Option : --

Q.5 रिक्त स्थान को भरने के लिए उपयुक्त शब्द का चयन करें।

गुंडों के हाथों में लाठियाँ देखकर उसके _____ फूल गये।

Ans

- 1. मुँह
- 2. फेफड़े
- 3. हाथ-पैर
- 4. गाल

Question ID : 9895805491
Chosen Option : --

Q.6 सही वर्तनी वाले शब्द का चयन करें।

Ans

- 1. सज्जता
- 2. सजजनता
- 3. सज्जन्ता
- 4. सज्जनता

Question ID : 9895805508
Chosen Option : --

Q.7 दिए गए शब्द के पर्यायवाची शब्द का चयन करें।

ध्वज

Ans

- 1. डंडा
- 2. कपड़ा
- 3. पताका
- 4. बयार

Question ID : 9895805503
Chosen Option : --

Q.8 रिक्त स्थान को भरने के लिए उपयुक्त शब्द का चयन करें।

दादा जी ने _____ को बुलाया और पौधे लगवाए।

Ans

- 1. दुकानदार
- 2. दर्जी
- 3. कुम्भकार
- 4. माली

Question ID : 9895805493
Chosen Option : --

Comprehension:

दिए गए अनुच्छेद में कुछ शब्द हटा दिए गए हैं। दिए गए विकल्पों की सहायता से रिक्त स्थान भरें। प्रत्येक संख्या के लिए उपयुक्त विकल्प का चयन करें।

सोने जैसी बहुमूल्य धातु को _____ (1) में पूरे संयम से तब तक तपाया जाता है जब तक उसकी खोट _____ (2) न हो जाए या वह जलकर भस्म न बन जाए। इसलिए हमें भी स्वर्ण की तरह _____ (3) होकर बाहर निकलने के लिए अपने _____ (4) में संयम की ज्वाला को हर समय प्रज्वलित रखनी चाहिए। जीवन की आकांक्षाओं के बहते हुए प्रवाह को रोक कर संयम का बाँध बना लेने पर जीवन _____ (5) कई गुना बढ़ जाती है।

SubQuestion No : 9

Q.9 गद्यांश में संकेतित रिक्त स्थान (1) के लिए उपयुक्त शब्द होगा -

- Ans
1. पृथ्वी
 2. पानी
 3. आग
 4. हवा

Question ID : 9895805495
Chosen Option : --

Comprehension:

दिए गए अनुच्छेद में कुछ शब्द हटा दिए गए हैं। दिए गए विकल्पों की सहायता से रिक्त स्थान भरें। प्रत्येक संख्या के लिए उपयुक्त विकल्प का चयन करें।

सोने जैसी बहुमूल्य धातु को _____ (1) में पूरे संयम से तब तक तपाया जाता है जब तक उसकी खोट _____ (2) न हो जाए या वह जलकर भस्म न बन जाए। इसलिए हमें भी स्वर्ण की तरह _____ (3) होकर बाहर निकलने के लिए अपने _____ (4) में संयम की ज्वाला को हर समय प्रज्वलित रखनी चाहिए। जीवन की आकांक्षाओं के बहते हुए प्रवाह को रोक कर संयम का बाँध बना लेने पर जीवन _____ (5) कई गुना बढ़ जाती है।

SubQuestion No : 10

Q.1
0

गद्यांश में संकेतित रिक्त स्थान (2) के लिए उपयुक्त शब्द होगा -

- Ans 1. अलग
 2. वर्षा
 3. हठ
 4. मिल

Question ID : 9895805496
Chosen Option : --

Comprehension:

दिए गए अनुच्छेद में कुछ शब्द हटा दिए गए हैं। दिए गए विकल्पों की सहायता से रिक्त स्थान भरें। प्रत्येक संख्या के लिए उपयुक्त विकल्प का चयन करें।

सोने जैसी बहुमूल्य धातु को _____ (1) में पूरे संयम से तब तक तपाया जाता है जब तक उसकी खोट _____ (2) न हो जाए या वह जलकर भस्म न बन जाए। इसलिए हमें भी स्वर्ण की तरह _____ (3) होकर बाहर निकलने के लिए अपने _____ (4) में संयम की ज्वाला को हर समय प्रज्वलित रखनी चाहिए। जीवन की आकांक्षाओं के बहते हुए प्रवाह को रोक कर संयम का बाँध बना लेने पर जीवन _____ (5) कई गुना बढ़ जाती है।

SubQuestion No : 11

Q.1 गद्यांश में संकेतित रिक्त स्थान (3) के लिए उपयुक्त शब्द होगा -

- Ans 1. अशुद्ध
 2. ठंडा
 3. शुद्ध
 4. बुरा

Question ID : 9895805497
Chosen Option : --

Comprehension:

दिए गए अनुच्छेद में कुछ शब्द हटा दिए गए हैं। दिए गए विकल्पों की सहायता से रिक्त स्थान भरें। प्रत्येक संख्या के लिए उपयुक्त विकल्प का चयन करें।

सोने जैसी बहुमूल्य धातु को _____ (1) में पूरे संयम से तब तक तपाया जाता है जब तक उसकी खोट _____ (2) न हो जाए या वह जलकर भस्म न बन जाए। इसलिए हमें भी स्वर्ण की तरह _____ (3) होकर बाहर निकलने के लिए अपने _____ (4) में संयम की ज्वाला को हर समय प्रज्वलित रखनी चाहिए। जीवन की आकांक्षाओं के बहते हुए प्रवाह को रोक कर संयम का बाँध बना लेने पर जीवन _____ (5) कई गुना बढ़ जाती है।

SubQuestion No : 12

Q.1
2 गद्यांश में संकेतित रिक्त स्थान (4) के लिए उपयुक्त शब्द होगा -

- Ans
1. सिर
 2. हृदय
 3. हाथ
 4. पैर

Question ID : 9895805498
Chosen Option : --

Comprehension:

दिए गए अनुच्छेद में कुछ शब्द हटा दिए गए हैं। दिए गए विकल्पों की सहायता से रिक्त स्थान भरें। प्रत्येक संख्या के लिए उपयुक्त विकल्प का चयन करें।

सोने जैसी बहुमूल्य धातु को _____ (1) में पूरे संयम से तब तक तपाया जाता है जब तक उसकी खोट _____ (2) न हो जाए या वह जलकर भस्म न बन जाए। इसलिए हमें भी स्वर्ण की तरह _____ (3) होकर बाहर निकलने के लिए अपने _____ (4) में संयम की ज्वाला को हर समय प्रज्वलित रखनी चाहिए। जीवन की आकांक्षाओं के बहते हुए प्रवाह को रोक कर संयम का बाँध बना लेने पर जीवन _____ (5) कई गुना बढ़ जाती है।

SubQuestion No : 13

Q.1
3 गद्यांश में संकेतित रिक्त स्थान (5) के लिए उपयुक्त शब्द होगा -

Ans

1. मृत्यु
2. भोग
3. रोग
4. शक्ति

Question ID : 9895805499
Chosen Option : --

Q.1
4 दिये गये वाक्यांश के लिए एक शब्द चुनिए।

जिसका वर्णन न हो सके

Ans

1. माणिक्य
2. शोभनीय
3. हिरण्य
4. अवर्णनीय

Question ID : 9895805507
Chosen Option : --

Q.1
5 दिए गए शब्द का विलोम चुनें।

उग्र

Ans

1. शांत
- ✓ 2. अग्र
3. लड़ाई
- ✗ 4. अग्रज

Question ID : 9895805500
Chosen Option : --

Q.1
6 दिए गए वाक्य का वह भाग ज्ञात करें जिसमें कोई त्रुटि है।

विज्ञापन प्रभावकारी होते हैं इसलिए उनका समाजिक दायित्व बड़ा होती है।

Ans

1. समाजिक दायित्व
2. इसलिए उनका
3. बड़ा होती है।
4. विज्ञापन प्रभावकारी होते हैं

Question ID : 9895805485
Chosen Option : --

Q.1
7 दिए गए वाक्य में रेखांकित खंड को प्रतिस्थापित करने के लिए उपयुक्त विकल्प का चयन करें।

अपने देश को बना कपड़ा पहनना सभी भारतीयों की प्राथमिकता होनी चाहिए।

Ans

1. अपने देश पर बना कपड़ों
- ✓ 2. अपने देश में बना कपड़ा

3. अपना देश में बना कपड़ा
4. अपने देश पर बना कपड़ा

Question ID : 9895805487
Chosen Option : --

Q.1
8 दिए गए वाक्य का वह भाग ज्ञात करें जिसमें कोई त्रुटि है।

मनुष्य जब किसी के कष्ट को दूर करने का संकल्प करता है तब वह विशेष सुख पर अनुभव करता है।

Ans

1. दूर करने का संकल्प करता है
2. किसी के कष्ट को
3. मनुष्य जब
4. तब वह विशेष सुख पर अनुभव करता है।

Question ID : 9895805486
Chosen Option : --

Q.1
9 दिए गए वाक्य में रेखांकित खंड को प्रतिस्थापित करने के लिए उपयुक्त विकल्प का चयन करें।

व्यक्ति कुसंगति में पड़कर अपने अच्छाइयाँ खो देता है।

Ans

1. अपुन अच्छाइयाँ खो देता है।
2. अपना अच्छाइयाँ खो देता है।
3. अपनों अच्छाइयाँ खो देता है।
4. अपनी अच्छाइयाँ खो देता है।

Question ID : 9895805488
Chosen Option : --

Q.2
0 निम्नलिखित में से उस विकल्प का चयन करें जो 'तीसमार खाँ बनना' मुहावरे का अर्थ व्यक्त करता है।

Ans

1. अपने को बुद्धिमान समझना
2. तीस लोगों को मारना
3. अपने को शूरवीर समझना
4. अपने को अभिनेता समझना

Question ID : 9895805505
Chosen Option : --

Q.2
1 निम्नलिखित में से उस विकल्प का चयन करें जो 'तिल का ताड़ बनाना' मुहावरे का अर्थ व्यक्त करता है।

Ans

1. तिल को ताड़ में बदलना
2. किसी बात को अधिक महत्व न देना
3. छोटी सी बात को बड़ा-चढ़ाकर कहना
4. पेड़ पर तिल का आना

Question ID : 9895805504

Q.2
2 रिक्त स्थान को भरने के लिए उपयुक्त शब्द का चयन करें।

मुझे समुद्र के _____ बैठना अच्छा लगता है।

Ans

1. किनारे
2. नीचे
3. अंदर
- ✓ 4. ऊपर

Question ID : 9895805490

Chosen Option : --

Q.2
3 दिये गये वाक्यांश के लिए एक शब्द चुनिए।

जहाँ जाया न जा सके

Ans

- ✗ 1. सगम्य
2. कुगम्य
- ✓ 3. अगम्य
4. सुगम्य

Question ID : 9895805506

Chosen Option : --

Q.2
4 दिए गए शब्द के पर्यायवाची शब्द का चयन करें।

अपमान

Ans

1. तिरस्कार
- ✗ 2. उपकार
- ✓ 3. अदाकार
4. कुम्भकार

Question ID : 9895805502

Chosen Option : --

Q.2
5 दिए गए वाक्य का वह भाग ज्ञात करें जिसमें कोई त्रुटि है।

फल और सब्जियाँ इतने महँगा हो गए कि भाव पूछने में डर लगता है।

Ans

1. फल और सब्जियाँ
2. हो गए कि
3. इतने महँगा
4. भाव पूछने में डर लगता है।

Question ID : 9895805484

Chosen Option : --

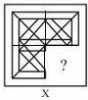


Constable (GD) in CAPFs, NIA, SSF and Rifleman (GD) in Assam Rifles Examination, 2018

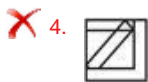
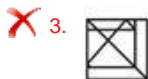
Roll No. :	
Registration No.	
Name :	
Exam Venue :	iON Digital Zone iDZ Attingal
Exam Time :	12:30 PM - 2:00 PM
Exam Date :	18/02/2019

Section : **General Section**

Q.1 Select a figure from amongst the four alternatives that when placed in the blank space (?) of figure X will complete the pattern. (Rotation is not allowed).



Ans

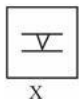


Question ID : 9895803820

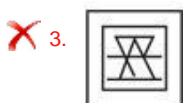
Chosen Option : 2

Q.2

Choose the option in which the figure marked 'X' is embedded. (Rotation is not allowed)



Ans



Question ID : 9895803821

Chosen Option : 2

Q.3 Choose the odd one out of the given options.

- Ans 1. KJL
 2. FIL
 3. GIK
 4. DKL

Question ID : 9895803801
Chosen Option : 4

Q.4 A square transparent sheet with a pattern is given. How will the pattern appear when the transparent sheet is folded along the dotted line?



Ans

- 1.
- 2.
- 3.
- 4.

Question ID : 9895803823
Chosen Option : 3

Q.5 Select the option that is related to the third number in the same way as the second number is related to the first number.

36 : 324 :: 11 : ?

- Ans 1. 259
 2. 121
 3. 22
 4. 221

Question ID : 9895803815
Chosen Option : 1

Q.6 The statements below are followed by two conclusions labeled I and II. Assuming that the information in the statements is true, even if it appears at variance with generally established facts, decide which conclusion(s) logically and definitely follow(s) from the information given in the statements.

Statements:

- 1) All toads are frogs.
- 2) All frogs are snakes.

Conclusion:

- I. Some snakes are toads.
- II. Some frogs are toads.

- Ans 1. Only conclusion I follows.
 2. Either conclusion I or conclusion II follows.

3. Both conclusions follow.
4. Only conclusion II follows.

Question ID : 9895803811
Chosen Option : 3

Q.7 Eight friends A, B, C, D, E, F, G and H are sitting around a circular table facing each other for a lunch. A is opposite D and third to the right of B. G is between A and F. H is to the right of A. E is between C and D. Who is sitting opposite B?

- Ans 1. C
2. E
3. F
4. H

Question ID : 9895803809
Chosen Option : 2

Q.8 Seven friends O, P, Q, R, S, T and U are watching a movie sitting in a row. P is sitting at one extreme end. Q is sitting to the immediate left of S. P is sitting second to the right of T. U is not sitting at any extreme end. O is sitting between R and T. Who is sitting at the extreme left end?

- Ans 1. T
2. Q
3. R
4. P

Question ID : 9895803808
Chosen Option : 2

Q.9 Select the option that is related to the third term in the same way as the second term is related to the first term.

Ichthyology : Fishes :: Hematology : ?

- Ans 1. Ligaments
2. Blood
3. Tissue
4. Bone

Question ID : 9895803803
Chosen Option : 2

Q.1
0 Select the option that will correctly replace the question mark (?) in the series.

5, 17, 34, 61, ?

- Ans 1. 105
2. 103
3. 115
4. 125

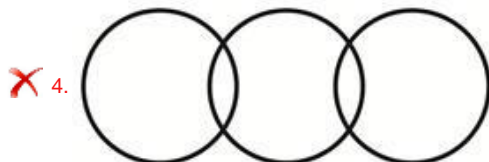

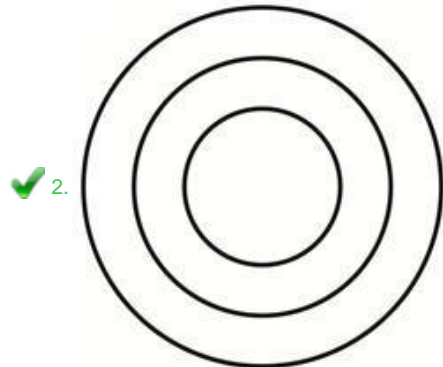

Question ID : 9895803814
Chosen Option : 2

Q.1
1

Select the Venn diagram that best represents the given set of classes.

Paragraph, Word, Sentence

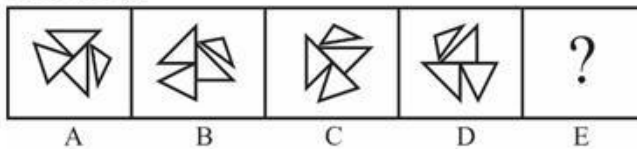
Ans



Question ID : 9895803824
Chosen Option : 2

Q.1
2 Choose the option that would follow next in the given figure series.

Problem Fig.



Ans



✓ 2.



✗ 3.



✗ 4.



Question ID : 9895803819
Chosen Option : 2

Q.1 Find out the two signs to be interchanged to make the following equation correct.

3

$$25 + 25 \times 25 - 25 \div 25 = -599$$

- Ans
- ✗ 1. + and ×
 - ✓ 2. × and ÷
 - ✗ 3. - and ×
 - ✗ 4. - and ÷

Question ID : 9895803818
Chosen Option : 2

Q.1 Choose the option that most closely resembles the mirror image of the given figure.

4



- Ans
- ✓ 1.
 - ✗ 2.
 - ✗ 3.
 - ✗ 4.

Question ID : 9895803822
Chosen Option : 2

Q.1 Choose the odd number out of the given options.

5

Ans

- 1. 65
- 2. 52
- 3. 26
- 4. 97

Question ID : 9895803816
Chosen Option : 4

Q.1 Select the option that will correctly replace the question mark (?) in the series.

102, 98, 82, 46, ?

- Ans
- 1. 20
 - 2. 18
 - 3. -20
 - 4. -18

Question ID : 9895803813
Chosen Option : 2

Q.1 Select the option that is related to the third term in the same way as the second term is related to the first term.

7 Famous : Renowned :: Ban : ?

- Ans
- 1. Use
 - 2. Packet
 - 3. Allow
 - 4. Prohibition

Question ID : 9895803804
Chosen Option : 2

Q.1 The statements below are followed by two conclusions labeled I and II. Assuming that the information in the statements is true, even if it appears at variance with generally established facts, decide which conclusion(s) logically and definitely follow(s) from the information given in the statements.

Statements:

- 1) Some manure are ammonia.
- 2) Some ammonia are potash.

Conclusion:

- I. Some ammonia are manure.
- II. Some potash are ammonia.

- Ans
- 1. Only conclusion I follows.
 - 2. Both conclusions follow.
 - 3. Neither conclusion I nor conclusion II follows.
 - 4. Only conclusion II follows.

Question ID : 9895803812
Chosen Option : 2

Q.1 Select the option that is related to the third term in the same way as the second term is related to the first term.

9 LEVEL : MFVDK :: FENCE : ?

- Ans
- 1. GFNDB
 - 2. FGND B
 - 3.

4. FGNBD

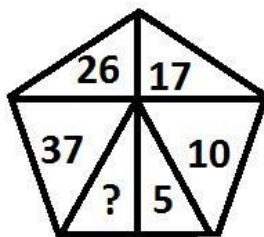
Question ID : 9895803805
Chosen Option : 4

Q.2 In a certain code, ABOVE is written as ABEOV. How will QUESTION be written in that code?
0

- Ans 1. EINOQSTU
 2. EINQOSTU
 3. EINOQTSU
 4. USINVSIN

Question ID : 9895803806
Chosen Option : 2

Q.2 Select the option that will correctly replace the question mark (?) in the given pattern.
1



- Ans 1. 13
 2. 3
 3. 50
 4. 49

Question ID : 9895803817
Chosen Option : 2

Q.2 J, K, L, M, N and O are six teachers. Each one teaches a different subject out of Hindi, English, Math, Science, Social Science and Arts, not necessarily in the same order. Each of them teaches on only one day, from Monday to Saturday, not necessarily in the same order.

J teaches Science on Wednesday. O teaches Math second after J. K teaches on the first day of the week, but teaches neither Hindi nor English. M teaches English before N and L teaches Arts before J. Which subject is taught on Saturday?

- Ans 1. Hindi
 2. English
 3. Social Science
 4. Science

Question ID : 9895803810
Chosen Option : 2

Q.2 Choose the odd one out of the given options.
3

- Ans 1. Ear
 2. Kidney
 3. Eye
 4. Nose

Question ID : 9895803802

Q.2
4 In a certain code, DIG is written as 20. How will FEED be written in that code?

- Ans
- 1. 80
 - 2. 60
 - 3. 20
 - 4. 90

Question ID : 9895803807
Chosen Option : 3

Q.2
5 Select the option that will correctly replace the question mark (?) in the series.

QFM, OHL, MJK, ?

- Ans
- 1. KJL
 - 2. KLJ
 - 3. JKL
 - 4. LKJ

Question ID : 9895803800
Chosen Option : 2

Q.2
6 The Himalayas are an example of _____ mountains.

- Ans
- 1. block
 - 2. plateau
 - 3. volcanic
 - 4. fold

Question ID : 9895805362
Chosen Option : 1

Q.2
7 The raga 'Miya Malhar' was created by:

- Ans
- 1. Tansen
 - 2. Mira Bai
 - 3. Amir Khusro
 - 4. Pandit Jasraj

Question ID : 9895805382
Chosen Option : 3

Q.2
8 Pokkali, a unique variety of rice which can sustain in salinity is endemic to which state of India?

- Ans
- 1. Goa
 - 2. Andhra Pradesh
 - 3. Kerala
 - 4. Telangana

Question ID : 9895805383
Chosen Option : 3

Q.2 With reference to the Kangra School of Painting, which of the following statements is correct?
9

- Ans
1. Its theme is prosaic in nature
 2. It uses strong colours with deep Red and Black
 3. It was inspired by the Vaishnavite traditions
 4. It was developed during the reign of Samudragupta

Question ID : 9895805360

Chosen Option : 1

Q.3 When the government's total revenue, excluding borrowings, is less than the planned expenditure, it is called:
0

- Ans
1. revenue deficit
 2. budget shortfall
 3. fiscal deficit
 4. deficit financing

Question ID : 9895805373

Chosen Option : 1

Q.3 "Sanitation is more important than independence" – Who said this?
1

- Ans
1. C Rajagopalachari
 2. Mahatma Gandhi
 3. Jawaharlal Nehru
 4. Subhash Chandra Bose

Question ID : 9895805369

Chosen Option : 1

Q.3 "Sattriya" is a dance form which has its origins in which state of India?
2

- Ans
1. Karnataka
 2. Andhra Pradesh
 3. Tamil Nadu
 4. Assam

Question ID : 9895805381

Chosen Option : 2

Q.3 With which sport is Durand Cup associated?
3

- Ans
1. Football
 2. Hockey
 3. Tennis
 4. Cricket

Question ID : 9895805379

Chosen Option : 2

Q.3 Ozone depletion is greatest near:
4

Ans

1. tropics
2. equator
3. poles
4. oceans

Question ID : 9895805366
Chosen Option : 4

Q.3
5 Which institution is responsible for calculating the GDP of India?

- Ans
1. Ministry of Finance
 2. Reserve Bank of India
 3. Central Statistics Office
 4. Chief Economic Advisor

Question ID : 9895805375
Chosen Option : 1

Q.3
6 When you heat a China dish containing 1gm of Copper powder, a Black substance is formed on the surface of the powder due to:

- Ans
1. Atomization
 2. Carbonization
 3. Oxidation
 4. Desalinization

Question ID : 9895805365
Chosen Option : 2

Q.3
7 Bedaquiline drug was developed to treat which of the following diseases?

- Ans
1. Acute Myeloid Leukemia
 2. Cholera
 3. MDR-TB
 4. Osteoarthritis

Question ID : 9895805376
Chosen Option : 2

Q.3
8 Which of the following features are used by Protista organisms for locomotion?

- Ans
1. Maxillia
 2. Flagella
 3. Ephemera
 4. Chimera

Question ID : 9895805368
Chosen Option : 1

Q.3
9 Andal, a Bhakti saint was associated to which of the following religious sects?

- Ans
1. Vaishnavism
 2. Shaivism

- 3. Shaktism
- 4. Buddhism

Question ID : 9895805361
Chosen Option : 1

Q.4
0 When were the first modern Olympic Games held?

- Ans
- 1. 1896
 - 2. 1935
 - 3. 1943
 - 4. 1921

Question ID : 9895805380
Chosen Option : 1

Q.4
1 Which of the following rivers flows into the Arabian Sea?

- Ans
- 1. Narmada
 - 2. Kaveri
 - 3. Krishna
 - 4. Godavari

Question ID : 9895805363
Chosen Option : 2

Q.4
2 Which is the highest peace time gallantry award in India?

- Ans
- 1. Ashok Chakra
 - 2. Kirti Chakra
 - 3. Mahavir Chakra
 - 4. Param Vir Chakra

Question ID : 9895805377
Chosen Option : 4

Q.4
3 Who is the author of the book 'The Discovery of India'?

- Ans
- 1. Atal Bihari Vajpayee
 - 2. Indira Gandhi
 - 3. Mahatma Gandhi
 - 4. Jawaharlal Nehru

Question ID : 9895805378
Chosen Option : 1

Q.4
4 The Planning Commission was set up by the Government of India in the year:

- Ans
- 1. 1948
 - 2. 1950
 - 3. 1949
 - 4. 1951

Question ID : 9895805371

Q.4
5 Which of the following is NOT a feature of the Constitution of India?

- Ans
1. Separation of Powers
 2. Unitary System
 3. Fundamental Rights
 4. Federalism

Question ID : 9895805370
Chosen Option : 1

Q.4
6 As per 2011 census, which of the following states in India has the lowest population density?

- Ans
1. Sikkim
 2. Chhattisgarh
 3. Arunachal Pradesh
 4. Himachal Pradesh

Question ID : 9895805364
Chosen Option : 1

Q.4
7 A loan becomes a Non-Performing Asset (NPA) when the interest or principal becomes overdue for a period of:

- Ans
1. 5 years
 2. 90 days
 3. 180 days
 4. 365 days

Question ID : 9895805374
Chosen Option : 3

Q.4
8 A Eukaryotic cell has membrane bound organelles, including a nucleus, which allow cellular processes to be carried out in _____.

- Ans
1. Bifurcation
 2. Isolation
 3. Inclusion
 4. Cassation

Question ID : 9895805367
Chosen Option : 3

Q.4
9 The 'Gandhara School of Art' was developed under the _____ Dynasty.

- Ans
1. Kushana
 2. Maurya
 3. Nanda
 4. Chola

Question ID : 9895805359
Chosen Option : 2

Q.5
0 The Constituent Assembly met for the first time in _____.

- Ans
- 1. 1945
 - 2. 1946
 - 3. 1947
 - 4. 1948

Question ID : 9895805372
Chosen Option : 3

Q.5 Three persons A, B and C started a business with their shares in the ratio 3 : 4 : 5. After 4 months B withdrew his 50% share and C withdrew his 20% share 4 months prior to completion of the year. If total profit in the year is ₹ 31,000 then find the share of A in the profit.

- Ans
- 1. ₹ 7750
 - 2. ₹ 9000
 - 3. ₹ 9300
 - 4. ₹ 10330

Question ID : 9895805676
Chosen Option : 1

Q.5 Marked price of an article is ₹ 8840. If discount of 35% is given on the article, then what will be the selling price of the article?

- Ans
- 1. ₹ 6324
 - 2. ₹ 6176
 - 3. ₹ 6548
 - 4. ₹ 5746

Question ID : 9895805670
Chosen Option : 2

Q.5 Anil, Dinesh and Deepak together can complete a work in 40 days. Anil and Dinesh together can complete the same work in 50 days. In how many days Deepak alone can complete the same work?

- Ans
- 1. 90 days
 - 2. 200 days
 - 3. 150 days
 - 4. 75 days

Question ID : 9895805680
Chosen Option : 2

Q.5 Suraj covers a distance of 18 km in 12 minutes. If his speed is decreases by 30 km/hr, then how much time will Suraj take to cover the same distance?

- Ans
- 1. 12 minutes
 - 2. 16 minutes
 - 3. 20 minutes
 - 4. 18 minutes

Question ID : 9895805683
Chosen Option : 4

Q.5 The difference between the simple interest and compound interest (interest is compounded half yearly) on a sum at the rate of 25% per annum for one year is ₹ 4375. What will be the principal?

Ans

- 1. ₹ 280000
- 2. ₹ 85000
- 3. ₹ 80000
- 4. ₹ 75000

Question ID : 9895805679
Chosen Option : 4

Q.5 A shopkeeper sells two articles, one of them with a profit of 10% for ₹ 1100 and another with a loss of 10% for ₹ 900.
6 What will be the profit or loss percent?

- Ans**
- 1. ₹ 1000
 - 2. Neither profit nor loss
 - 3. 20% profit
 - 4. 20% loss

Question ID : 9895805674
Chosen Option : 3

Q.5 A bag has ₹ 785 in the denomination of ₹ 2, ₹ 5 and ₹ 10 coins. The coins are in the ratio of 6 : 9 : 10. How many coins
7 of ₹ 5 are in the bag?

- Ans**
- 1. 60
 - 2. 12
 - 3. 45
 - 4. 24

Question ID : 9895805675
Chosen Option : 4

Q.5 The table given below shows the number of students enrolled in different courses of different colleges.
8

Colleges	Courses			
	B1	B2	B3	B4
C1	65	56	65	103
C2	68	58	71	112
C3	72	54	88	125
C4	76	52	75	120
C5	69	60	79	126

Which college has the highest average number of students per course?

- Ans**
- 1. C4
 - 2. C2
 - 3. C3
 - 4. C5

Question ID : 9895805688
Chosen Option : 1

Q.5 In the table given below Marks of 4 students in 5 different Subjects are given. Total Marks of each subject is 100.
9

	Math	English	Hindi	Social Science	Science
S1	98	60	85	75	92
S2	97	65	80	80	90
S3	95	70	85	70	95
S4	96	62	70	80	90

What is the difference in average marks of students S1 and S4?

- Ans**
- 1. 1.4
 - 2. 3.4
 - 3. 2
 - 4. 2.4

Question ID : 9895805689
Chosen Option : 3

Q.6
0 If 30% of x is same as 40% of y then what is $y : x$?

- Ans
- 1. 4 : 3
 - 2. 3 : 4
 - 3. 7 : 4
 - 4. 4 : 7

Question ID : 9895805677
Chosen Option : 1

Q.6
1 Three cubes each of sides 7 cm are joined end to end. Find the surface area of the resulting solid.

- Ans
- 1. 686 cm^2
 - 2. 686 cm
 - 3. 882 cm^2
 - 4. 882 cm

Question ID : 9895805685
Chosen Option : 3

Q.6
2 If a 32 year old man is replaced by a new man, then the average age of 42 men increases by 1 year. What is the age of the new man?

- Ans
- 1. 72 years
 - 2. 75 years
 - 3. 74 years
 - 4. 73 years

Question ID : 9895805669
Chosen Option : 3

Q.6
3 A solid toy is in the form of hemisphere surmounted by right circular cone. Height of the cone is 4 cm and diameter of the base is 6 cm. What will be the surface area of the toy?

- Ans
- 1. $\frac{660}{7} \text{ cm}^2$
 - 2. $\frac{528}{7} \text{ cm}^2$
 - 3. $\frac{726}{7} \text{ cm}^2$
 - 4. $\frac{66}{7} \text{ cm}^2$

Question ID : 9895805684
Chosen Option : 2

Q.6
4 What is the value of $\left[100 \div 50 - 25 - 55 \text{ of } \left(\frac{1}{3} \times \frac{11}{9}\right)\right]$?

- Ans
- 1. $-\frac{1156}{27}$
 - 2. $-\frac{1382}{27}$

3. $-\frac{1321}{27}$

4. $-\frac{1226}{27}$

Question ID : 9895805666
Chosen Option : 2

Q.6 From a solid cylinder with base diameter 14 cm and height 20 cm hemispherical parts were cut from both the ends of the cylinder. Find the volume of the resultant object?

Ans 1. $\frac{4312}{3} \text{ cm}^3$

2. $\frac{4928}{3} \text{ cm}^3$

3. $\frac{9240}{3} \text{ cm}^3$

4. $\frac{13552}{3} \text{ cm}^3$

Question ID : 9895805686
Chosen Option : 2

Q.6 A sum of ₹ 4000 is lent on simple interest at the rate of 10% per annum. Simple interest for 5 years is how much more than the simple interest for 3 years?

Ans 1. ₹ 400

2. ₹ 600

3. ₹ 800

4. ₹ 1200

Question ID : 9895805678
Chosen Option : 1

Q.6 14 observations are 10, 11, 11, 12, 13, 14, 12, 13, 10, 12, 12, 14, 14 and 15.

What is the median of the given observations?

Ans 1. 12

2. 13

3. 14

4. 10

Question ID : 9895805671
Chosen Option : 4

Q.6 If Vijay is travelling at the speed of 17.5 m/s, then how much distance will Vijay cover in 26 hours?

Ans 1. 1474 km

2. 1562 km

3. 1572 km

4. 1638 km

Question ID : 9895805682
Chosen Option : 3

Q.6
9

The table given below shows the number of students enrolled in different courses of different colleges.

Colleges	Courses			
	B1	B2	B3	B4
C1	65	56	65	103
C2	68	58	71	112
C3	72	54	88	125
C4	76	52	75	120
C5	69	60	79	126

What is the average number of students per college enrolled in course B2?

- Ans
- 1. 60
 - 2. 56
 - 3. 58
 - 4. 53

Question ID : 9895805687
Chosen Option : 1

Q.7 Product of Highest Common Factor and Least Common Multiple of two numbers is 216. If one of the number is 12, then what will be the ratio of these two numbers?

- 0
- Ans
- 1. 3 : 5
 - 2. 1 : 6
 - 3. 2 : 3
 - 4. 1 : 2

Question ID : 9895805665
Chosen Option : 2

Q.7 What is the value of $28 \div (11 - 4) + 384 \div (15 + 16 \div 4 + 4)$?

- 1
- Ans
- 1. $\frac{472}{23}$
 - 2. $\frac{476}{23}$
 - 3. $\frac{512}{23}$
 - 4. $\frac{524}{23}$

Question ID : 9895805667
Chosen Option : 1

Q.7 If 40% of a number is 105 more than the one-fourth of that number, then what will be the difference between the number and 35% of the number?

- 2
- Ans
- 1. 315
 - 2. 495
 - 3. 455
 - 4. 375

Question ID : 9895805672
Chosen Option : 1

Q.7 P alone can complete a work in 16 days and Q alone can complete the same work in 20 days. P and Q start the work together but Q leaves the work 7 days before the completion of work. In how many days the total work will be completed?

- 3
- Ans
- 1. 9 days
 - 2. 14 days
 - 3. 12 days

4. 18 days

Question ID : 9895805681
Chosen Option : 3

Q.7 The average monthly income of P and Q is ₹ 20000. The average monthly income of Q and R is ₹ 40000. Monthly income of R is how much more than monthly income of P?

- Ans 1. ₹ 40000
 2. ₹ 80000
 3. ₹ 20000
 4. ₹ 25000

Question ID : 9895805668
Chosen Option : 3

Q.7 Raju purchased glasses at the rate of ₹ 15 per glass and sold them at the rate of ₹ 12 per glass. On selling 42 glasses, what will be the loss percentage?

- Ans 1. 33.33%
 2. 25%
 3. 20%
 4. 14.28%

Question ID : 9895805673
Chosen Option : 2

Section : English Language

Q.1 Select the option that means the same as the given idiom.

To miss the boat

- Ans 1. To miss an opportunity
 2. To miss the journey by boat
 3. To fail to complete the work
 4. To decide to travel by air

Question ID : 9895805223
Chosen Option : 4

Q.2 Select the antonym of the given word

CONTRARY

- Ans 1. Predetermined
 2. Agreeable
 3. Balanced
 4. Neutral

Question ID : 9895805221
Chosen Option : 4

Q.3 Select the most appropriate word to fill in the blank.

India's Republic Day Parade had, among the main _____, an all-women's marching contingent.

- Ans
1. displays
 2. spectacle
 3. demonstrations
 4. attractions

Question ID : 9895805229
Chosen Option : 4

Q.4 From the given options, identify the segment in the sentence which contains the grammatical error.

Having worked for the whole day, you shall have taken some rest and begun again.

- Ans
1. Having worked for
 2. some rest and begun again
 3. the whole day
 4. you should have taken

Question ID : 9895805204
Chosen Option : 4

Q.5 Select the most appropriate option to substitute the underlined segment in the given sentence. If there is no need to substitute it, select No improvement.

In the interview held recently, I answer the questions as best as I could.

- Ans
1. I answer the question as best as I could.
 2. I answered the questions as best as I could.
 3. I answered the question as best as I can.
 4. No improvement.

Question ID : 9895805209
Chosen Option : 3

Q.6 From the given options, identify the segment in the sentence which contains the grammatical error.

The researchers have found that all species makes a constructive contribution to the ecology of the earth.

- Ans
1. a constructive contribution to
 2. that all species makes
 3. the ecology of the earth.
 4. The researchers have found

Question ID : 9895805205
Chosen Option : 2

Q.7 Select the word which means the same as the group of words given.

The method and practice of teaching

- Ans
1. Psychology
 2. Methodology
 3. Pedagogy
 4. Philosophy

Question ID : 9895805224
Chosen Option : 2

Q.8 Select the most appropriate option to substitute the underlined segment in the given sentence. If there is no need to substitute it, select No improvement.

As you can see from my resume, I am working in Mumbai since 2016.

- Ans
1. No improvement.
 2. I am work in Mumbai since 2016.
 3. I am working in Mumbai from 2016.
 4. I have been working in Mumbai since 2016.

Question ID : 9895805207
Chosen Option : 4

Q.9 From the given options, identify the segment in the sentence which contains the grammatical error.

One could argue that these are the compulsions of parliamentary democracy for smooth functioning for the State.

- Ans
1. these are the compulsions
 2. of parliamentary democracy
 3. functioning for the State.
 4. One could argue that

Question ID : 9895805206
Chosen Option : 2

Q.10 Select the word which means the same as the group of words given.

A person who presents a radio/television programme

- Ans
1. Alchemist
 2. Reporter
 3. Anarchist
 4. Anchor

Question ID : 9895805225
Chosen Option : 2

Comprehension:

In the following passage some words have been deleted. Fill in the blanks with the help of the alternatives given.

Given that the availability of safe drinking water touches the lives of everyone, the _____ (1) of Safe Drinking Water Mission can hardly be underestimated. Undoubtedly, this is one of the most _____ (2) public goods problems to solve. The private solution of reaching out for bottled water due to risks posed by tap water is a _____ (3) one. Even the poor are forced to choose between risking hospital expenses and buying bottled water. Taking into consideration the _____ (4) scenario, it is the duty of every citizen to find out possible and inexpensive means to _____ (5) that safe drinking water is available to all.

SubQuestion No : 11

Q.1
1

Select the most appropriate option that will fill in the blank number 1.

- Ans
- 1. significance
 - 2. safety
 - 3. progress
 - 4. consequence

Question ID : 9895805213
Chosen Option : 2

Comprehension:

In the following passage some words have been deleted. Fill in the blanks with the help of the alternatives given.

Given that the availability of safe drinking water touches the lives of everyone, the _____ (1) of Safe Drinking Water Mission can hardly be underestimated. Undoubtedly, this is one of the most _____ (2) public goods problems to solve. The private solution of reaching out for bottled water due to risks posed by tap water is a _____ (3) one. Even the poor are forced to choose between risking hospital expenses and buying bottled water. Taking into consideration the _____ (4) scenario, it is the duty of every citizen to find out possible and inexpensive means to _____ (5) that safe drinking water is available to all.

SubQuestion No : 12

Q.1
2 Select the most appropriate option that will fill in the blank number 2.

- Ans
- 1. difficult
 - 2. complete
 - 3. whole
 - 4. ready

Question ID : 9895805214
Chosen Option : 1

Comprehension:

In the following passage some words have been deleted. Fill in the blanks with the help of the alternatives given.

Given that the availability of safe drinking water touches the lives of everyone, the _____ (1) of Safe Drinking Water Mission can hardly be underestimated. Undoubtedly, this is one of the most _____ (2) public goods problems to solve. The private solution of reaching out for bottled water due to risks posed by tap water is a _____ (3) one. Even the poor are forced to choose between risking hospital expenses and buying bottled water. Taking into consideration the _____ (4) scenario, it is the duty of every citizen to find out possible and inexpensive means to _____ (5) that safe drinking water is available to all.

SubQuestion No : 13

Q.1
3 Select the most appropriate option that will fill in the blank number 3.

- Ans
- 1. simple
 - 2. material
 - 3. factual
 - 4. costly

Question ID : 9895805215
Chosen Option : 2

Comprehension:

In the following passage some words have been deleted. Fill in the blanks with the help of the alternatives given.

Given that the availability of safe drinking water touches the lives of everyone, the _____ (1) of Safe Drinking Water Mission can hardly be underestimated. Undoubtedly, this is one of the most _____ (2) public goods problems to solve. The private solution of reaching out for bottled water due to risks posed by tap water is a _____ (3) one. Even the poor are forced to choose between risking hospital expenses and buying bottled water. Taking into consideration the _____ (4) scenario, it is the duty of every citizen to find out possible and inexpensive means to _____ (5) that safe drinking water is available to all.

SubQuestion No : 14

Q.1
4 Select the most appropriate option that will fill in the blank number 4.

- Ans
- 1. public
 - 2. present
 - 3. general
 - 4. rural

Question ID : 9895805216
Chosen Option : 1

Comprehension:

In the following passage some words have been deleted. Fill in the blanks with the help of the alternatives given.

Given that the availability of safe drinking water touches the lives of everyone, the _____ (1) of Safe Drinking Water Mission can hardly be underestimated. Undoubtedly, this is one of the most _____ (2) public goods problems to solve. The private solution of reaching out for bottled water due to risks posed by tap water is a _____ (3) one. Even the poor are forced to choose between risking hospital expenses and buying bottled water. Taking into consideration the _____ (4) scenario, it is the duty of every citizen to find out possible and inexpensive means to _____ (5) that safe drinking water is available to all.

SubQuestion No : 15

Q.1
5 Select the most appropriate option that will fill in the blank number 5.

- Ans
- 1. ensure
 - 2. endorse

3. confirm

4. assure

Question ID : 9895805217
Chosen Option : 3

Q.1
6 Select the correctly spelt word.

Ans 1. Buraucracy

2. Bureaucrasy

3. Bureucracy

4. Bureaucracy

Question ID : 9895805226
Chosen Option : 1

Q.1
7 Select the synonym of the given word.

MITIGATE

Ans 1. Improve

2. Excuse

3. Lessen

4. Moderate

Question ID : 9895805219
Chosen Option : 2

Q.1
8 Select the synonym of the given word.

INDUSTRIOUS

Ans 1. Prompt

2. Fruitful

3. Diligent

4. Practical

Question ID : 9895805218
Chosen Option : 4

Q.1
9 Select the most appropriate option to substitute the underlined segment in the given sentence. If there is no need to substitute it, select No improvement.

The river is flooded and it has overflown its banks.

Ans 1. it overflowing its banks.

2. it has overflow its banks.

3. No improvement.

4. it overflow its banks.

Question ID : 9895805208
Chosen Option : 1

Q.2
0

Select the most appropriate option to fill in the blank.

We need not worry about anything _____ his commitment to the work he is assigned.

- Ans
- 1. access
 - 2. accept
 - 3. expect
 - 4. except

Question ID : 9895805211
Chosen Option : 4

Q.2
1 Select the antonym of the given word

SERENE

- Ans
- 1. Splendid
 - 2. Superb
 - 3. Showy
 - 4. Stressed

Question ID : 9895805220
Chosen Option : 4

Q.2
2 Select the most appropriate option to fill in the blank.

If an individual keeps his fingers crossed he _____ for the best.

- Ans
- 1. reacts
 - 2. suspects
 - 3. hopes
 - 4. responds

Question ID : 9895805210
Chosen Option : 3

Q.2
3 Select the correctly spelt word.

- Ans
- 1. Mathmetics
 - 2. Mathamatics
 - 3. Mathametics
 - 4. Mathematics

Question ID : 9895805227
Chosen Option : 4

Q.2
4 Select the most appropriate option to fill in the blank.

Sometimes it is necessary for an author to know what is going on in the minds of his _____.

- Ans
- 1. listeners
 - 2. viewers
 - 3. audience
 - 4. characters

Question ID : 9895805228
Chosen Option : 2

Q.2 Select the option that means the same as the given idiom.

To set aside

- Ans
1. To move sideways
 2. to reject an offer
 3. To stop temporarily
 - ✗ 4. To finish a work

Question ID : 9895805222
Chosen Option : 4

Section : Hindi Language

Q.1 रिक्त स्थान को भरने के लिए उपयुक्त शब्द का चयन करें।

मुझे विश्वास है कि अच्छे _____ जरूर आएँगे।

- Ans
1. दोपहर
 2. दिन
 - ✓ 3. रात
 4. सुबह

Question ID : 9895805519
Chosen Option : --

Q.2 निम्नलिखित में से उस विकल्प का चयन करें जो 'गड़े मुर्दे उखाड़ना' मुहावरे का अर्थ व्यक्त करता है।

- Ans
- ✗ 1. गड़े हुए मुर्दों को कहीं और ले जाना
 2. पुरानी बातें उठाना
 3. नई कहानियाँ बनाना
 4. मुर्दों को कब्र से उठाना

Question ID : 9895805530
Chosen Option : --

Q.3 रिक्त स्थान को भरने के लिए उपयुक्त शब्द का चयन करें।

दर्जी कपड़े _____ है।

- Ans
1. धुनता
 2. बुनता
 3. धोता
 4. सिलता

Q.4 दिए गए वाक्य में रेखांकित खंड को प्रतिस्थापित करने के लिए उपयुक्त विकल्प का चयन करें।

जब वह मुझसे मिलती थी तब मेरे चरणों छूने का प्रयास करती थी।

Ans

1. चरणों छूने का
2. चरण छूना के
3. चरण छूने का
4. चरणों छूना का

Q.5 दिए गए शब्द के पर्यायवाची शब्द का चयन करें।

रात्रि

Ans

1. हिमानी
2. रजनी
3. ज्ञानी
4. गजनी

Q.6 दिए गए शब्द का विलोम चुनें।

प्रवेश

Ans

1. पास
2. निकास
3. आना
4. दूर

Q.7 दिए गए वाक्य का वह भाग ज्ञात करें जिसमें कोई त्रुटि है।

उद्योग-धंधों के विस्तार से वृक्षों की संख्या से निरंतर गिरावट आ रही है।

Ans

1. विस्तार से
2. वृक्षों की संख्या से
3. उद्योग-धंधों के
4. निरंतर गिरावट आ रही है।

Q.8 दिये गये वाक्यांश के लिए एक शब्द दीजिये।

जिसमें जानने की इच्छा हो

- Ans
1. पिपासु
 2. जानकारी
 3. जिज्ञासु
 4. लोलुप

Question ID : 9895805533
Chosen Option : --

Q.9 सही वर्तनी वाले शब्द का चयन करें।

- Ans
1. उपरियुत
 2. उपर्युक्त
 3. उपरीयुक्त
 4. ऊर्पयुक्त

Question ID : 9895805534
Chosen Option : --

Q.10 दिए गए वाक्य का वह भाग ज्ञात करें जिसमें कोई त्रुटि है।

निश्चल और सरल बचपन की खुशियाँ चेहरे पर तैर रहा हैं।

- Ans
1. बचपन की खुशियाँ
 2. तैर रहा हैं।
 3. चेहरे पर
 4. निश्चल और सरल

Question ID : 9895805512
Chosen Option : --

Q.11 रिक्त स्थान को भरने के लिए उपयुक्त शब्द का चयन करें।

आभूषण मनुष्य की _____ बढ़ाते हैं।

- Ans
1. प्रेम
 2. शोभा
 3. शक्ति
 4. तेज

Question ID : 9895805517
Chosen Option : --

Q.1
2 दिए गए वाक्य में रेखांकित खंड को प्रतिस्थापित करने के लिए उपयुक्त विकल्प का चयन करें।

हम जो भी कार्य करें वह सावधानी पूर्वकता होना चाहिए।

Ans

1. सावधानी पूर्व होना चाहिए।
2. सावधानपूर्वक होना चाहिए।
3. सावधानतापूर्वक होना चाहिए।
4. सावधानीपूर्वक होना चाहिए।

Question ID : 9895805513
Chosen Option : --

Q.1
3 सही वर्तनी वाले शब्द का चयन करें।

Ans

1. घुड़दौड़
2. धूड़दौड़
3. घोडदौड़
4. घुडदौड़

Question ID : 9895805535
Chosen Option : --

Q.1
4 दिये गये वाक्यांश के लिए एक शब्द दीजिये।

जिसका कोई शत्रु न हो

Ans

1. मित्र
2. सहचर
3. अजातशत्रु
4. बंधु

Question ID : 9895805532
Chosen Option : --

Q.1
5 दिए गए शब्द के पर्यायवाची शब्द का चयन करें।

सरस्वती

Ans

1. माता
2. नेत्री
3. शारदा
4. देवी

Question ID : 9895805529
Chosen Option : --

Q.1
6

दिए गए वाक्य का वह भाग ज्ञात करें जिसमें कोई त्रुटि है।

प्रकृति केवल निर्माण ही नहीं, ध्वंस भी करता है।

Ans

1. प्रकृति केवल
2. ध्वंस भी
3. निर्माण ही नहीं,
4. करता है।

Question ID : 9895805510
Chosen Option : --

Q.1
7 रिक्त स्थान को भरने के लिए उपयुक्त शब्द का चयन करें।

उसने _____ से पत्र लिखा।

Ans

- ✓ 1. कलम
- ✗ 2. कागज
3. मोबाइल
4. किताब

Question ID : 9895805518
Chosen Option : --

Q.1
8 दिए गए शब्द का विलोम चुनें।

उत्तम

Ans

- ✗ 1. अधम
2. अति
3. बढ़िया
- ✗ 4. अधर

Question ID : 9895805527
Chosen Option : --

Comprehension:

निम्नलिखित गद्यांश के रिक्त स्थानों की पूर्ति गद्यांश के नीचे दिए गए प्रश्नों के अनुसार कीजिए -

अपना स्वभाव छोड़ना किसी के _____ (1) में नहीं है। दुष्ट एवं स्वार्थी को पहचान कर वैसे ही चलना चाहिए जैसे कीचड़ भरे मार्ग में हम बचते हुए चलते हैं। दुष्ट व्यक्ति कुछ पल के लिए अपना _____ (2) बदल सकता है परन्तु _____ (3) मिलते ही वह अपनी दुष्टता पर उतारू हो जाएगा। करेला मीठा नहीं हो सकता एवं साँप विष की जगह _____ (4) नहीं उगल सकता। पाँचों _____ (5) बराबर नहीं होती।

SubQuestion No : 19

Q.1 गद्यांश में संकेतित रिक्त स्थान (1) के लिए उपयुक्त शब्द होगा -

- Ans
1. दिमाग
 2. हाथ
 3. पैर
 4. आँख

Question ID : 9895805521
Chosen Option : --

Comprehension:

निम्नलिखित गद्यांश के रिक्त स्थानों की पूर्ति गद्यांश के नीचे दिए गए प्रश्नों के अनुसार कीजिए -

अपना स्वभाव छोड़ना किसी के _____ (1) में नहीं है। दुष्ट एवं स्वार्थी को पहचान कर वैसे ही चलना चाहिए जैसे कीचड़ भरे मार्ग में हम बचते हुए चलते हैं। दुष्ट व्यक्ति कुछ पल के लिए अपना _____ (2) बदल सकता है परन्तु _____ (3) मिलते ही वह अपनी दुष्टता पर उतारू हो जाएगा। करेला मीठा नहीं हो सकता एवं साँप विष की जगह _____ (4) नहीं उगल सकता। पाँचों _____ (5) बराबर नहीं होती।

SubQuestion No : 20

Q.2 गद्यांश में संकेतित रिक्त स्थान (1) के लिए उपयुक्त शब्द होगा -

- Ans
1. घूमना
 2. नाचना
 3. व्यवहार
 4. सोना

Comprehension:

निम्नलिखित गद्यांश के रिक्त स्थानों की पूर्ति गद्यांश के नीचे दिए गए प्रश्नों के अनुसार कीजिए -

अपना स्वभाव छोड़ना किसी के _____ (1) में नहीं है। दुष्ट एवं स्वार्थी को पहचान कर वैसे ही चलना चाहिए जैसे कीचड़ भरे मार्ग में हम बचते हुए चलते हैं। दुष्ट व्यक्ति कुछ पल के लिए अपना _____ (2) बदल सकता है परन्तु _____ (3) मिलते ही वह अपनी दुष्टता पर उतारू हो जाएगा। करेला मीठा नहीं हो सकता एवं साँप विष की जगह _____ (4) नहीं उगल सकता। पाँचों _____ (5) बराबर नहीं होती।

SubQuestion No : 21

Q.2
1 गद्यांश में संकेतित रिक्त स्थान (1) के लिए उपयुक्त शब्द होगा -

- Ans
- 1. अवसर
 - 2. बाजार
 - 3. घर
 - 4. नौकरी

Comprehension:

निम्नलिखित गद्यांश के रिक्त स्थानों की पूर्ति गद्यांश के नीचे दिए गए प्रश्नों के अनुसार कीजिए -

अपना स्वभाव छोड़ना किसी के _____ (1) में नहीं है। दुष्ट एवं स्वार्थी को पहचान कर वैसे ही चलना चाहिए जैसे कीचड़ भरे मार्ग में हम बचते हुए चलते हैं। दुष्ट व्यक्ति कुछ पल के लिए अपना _____ (2) बदल सकता है परन्तु _____ (3) मिलते ही वह अपनी दुष्टता पर उतारू हो जाएगा। करेला मीठा नहीं हो सकता एवं साँप विष की जगह _____ (4) नहीं उगल सकता। पाँचों _____ (5) बराबर नहीं होती।

SubQuestion No : 22

Q.2
2 गद्यांश में संकेतित रिक्त स्थान (1) के लिए उपयुक्त शब्द होगा -

- Ans
- 1. दूध

2. अमृत
- ✓ 3. पानी
4. कीचड़

Question ID : 9895805524
Chosen Option : --

Comprehension:

निम्नलिखित गद्यांश के रिक्त स्थानों की पूर्ति गद्यांश के नीचे दिए गए प्रश्नों के अनुसार कीजिए -

अपना स्वभाव छोड़ना किसी के _____ (1) में नहीं है। दुष्ट एवं स्वार्थी को पहचान कर वैसे ही चलना चाहिए जैसे कीचड़ भरे मार्ग में हम बचते हुए चलते हैं। दुष्ट व्यक्ति कुछ पल के लिए अपना _____ (2) बदल सकता है परन्तु _____ (3) मिलते ही वह अपनी दुष्टता पर उतारू हो जाएगा। करेला मीठा नहीं हो सकता एवं साँप विष की जगह _____ (4) नहीं उगल सकता। पाँचों _____ (5) बराबर नहीं होती।

SubQuestion No : 23

Q.2
3 गद्यांश में संकेतित रिक्त स्थान (1) के लिए उपयुक्त शब्द होगा -

- Ans
1. उँगलियाँ
 - ✗ 2. नाक
 - ✗ 3. कान
 4. आँख

Question ID : 9895805525
Chosen Option : --

Q.2
4 निम्नलिखित में से उस विकल्प का चयन करें जो 'तेल निकालना' मुहावरे का अर्थ व्यक्त करता है।

- Ans
- ✗ 1. तेल के कुएँ से तेल बाहर निकालना
 2. कम काम लेना
 3. बहुत अधिक काम करा लेना
 - ✗ 4. कम काम करना

Question ID : 9895805531
Chosen Option : --

Q.2
5 दिए गए वाक्य में रेखांकित खंड को प्रतिस्थापित करने के लिए उपयुक्त विकल्प का चयन करें।

जिस दिन मैं उस संत से मिली, उनके वाणी से मैं प्रभावित हो गई।

- Ans
1. उनसे वाणी की
 2. उनका वाणी से

✗ उनकी वाणी से

✗ उनमें वाणी से

Constable (GD) in CAPFs, NIA, SSF and Rifleman (GD) in Assam Rifles Examination, 2018

Roll No. :	
Registration No.	
Name :	
Exam Venue :	iON Digital Zone iDZ Hebbal
Exam Time :	4:00 PM - 5:30 PM
Exam Date :	18/02/2019

Section : General Section

Q.1 Which one of the following four-letter clusters does NOT belong to the group?

- Ans
- 1. NKLM
 - 2. SOPQ
 - 3. WTUV
 - 4. HEFG

Question ID : 9895803826
Chosen Option : 2

Q.2 Four numbers have been given out of which three are alike in some manner, while one is different. Choose the odd one.

- Ans
- 1. 73
 - 2. 53
 - 3. 33
 - 4. 23


Question ID : 9895803841
Chosen Option : 1

Q.3 Select the option that is related to the third term in the same way as the second term is related to the first term.

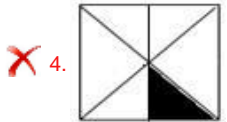
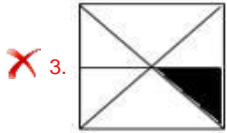
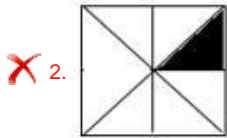
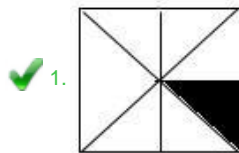
- Ans
- CPFL : XT :: WXYZ : ?
- 1. OUQS
 - 2. TNRP
 - 3. UOQS
 - 4. UQSO

Question ID : 9895803830
Chosen Option : 4

Q.4 Choose the figure from the options that would follow next in the given series.



Ans



Question ID : 9895803844
Chosen Option : 4

Q.5 Six friends A, B, C, D, E and F are sitting around a round table facing the centre. C is seated between A and B, who is to the immediate left of D. If C is facing E, who is facing F?

- Ans
- ✗ 1. A
 - ✗ 2. D
 - ✓ 3. B
 - ✗ 4. E

Question ID : 9895803833
Chosen Option : 1

Q.6 Pick the odd one out.

- Ans
- ✗ 1. London
 - ✓ 2. Spain
 - ✗ 3. Paris
 - ✗ 4. Rome

Question ID : 9895803827
Chosen Option : 4

Q.7 If in a code language, MOTHER is coded as OMHTRE, then THURSDAY would be coded as:

- Ans
- ✗ 1. HTRUSDAY
 - ✓ 2. HTRUDSYA
 - ✗ 3. HTRUSDYA
 - ✗ 4. UHTDSRYA

Question ID : 9895803831
Chosen Option : 2

Q.8 The numbers in the following set are related in a certain way. Choose the set that is similar to the following set:

{4, 6, 9}

- Ans
- 1. {6, 8, 12}

2. {9, 15, 18}

3. {12, 14, 18}

4. {6, 12, 24}

Question ID : 9895803842

Chosen Option : 1

Q.9 Select the correct option that will fill in the blank and complete the series.

1, 3, 8, 19, 42, ____

Ans 1. 89

2. 77

3. 93

4. 85

Question ID : 9895803838

Chosen Option : 1

Q.1₀ Select the correct option that will fill in the blank and complete the series.

6, 9, 18, 27, ____, 81

Ans 1. 62

2. 54

3. 48

4. 36

Question ID : 9895803839

Chosen Option : 2

Q.1₁ Pick the odd pair out.

Ans 1. 5-31

2. 3-23

3. 12-86

4. 8-58

Question ID : 9895803840

Chosen Option : 1

Q.1₂ If in a code language, MACE = 5 and MASTER = 7, then SOLUTION = ?

Ans 1. 8

2. 11

3. 10

4. 9

Question ID : 9895803832

Chosen Option : 4

Q.1₃

Select the option that is related to the third term in the same way as the second term is related to the first term.

Heart : Veins :: River : ?

- Ans
- 1. Current
 - 2. Water
 - 3. Tributaries
 - 4. Ocean

Question ID : 9895803829
Chosen Option : 1

Q.1 Select the correct option that will fill in the blank and complete the series.

4

pmtz, rkvx, tixv, vgzt, _____

- Ans
- 1. yerb
 - 2. zdcw
 - 3. xeyv
 - 4. xebr

Question ID : 9895803825
Chosen Option : 3

Q.1 The statements below are followed by two conclusions labeled I and II. Assuming that the information in the statements is true, even if it appears to be at variance with generally established facts, decide which conclusion(s) logically and definitely follow(s) from the information given in the statements.

5

Statements:

- 1.) All cups are mugs.
- 2.) All mugs are utensils.

Conclusions:

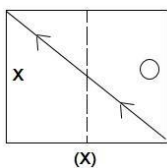
- I. All cups are utensils.
- II. Some utensils are cups.

- Ans
- 1. Only conclusion I follows
 - 2. Neither conclusion I nor II follows
 - 3. Both conclusions I and II follow
 - 4. Only conclusion II follows

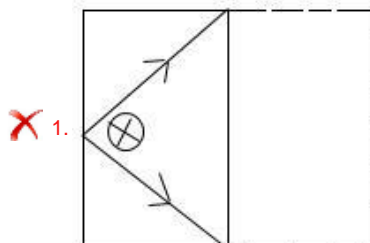
Question ID : 9895803836
Chosen Option : 3

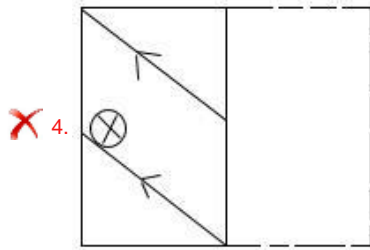
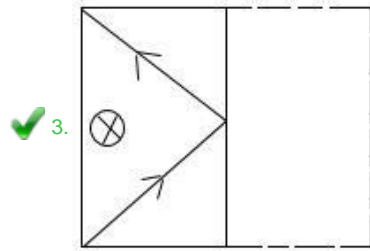
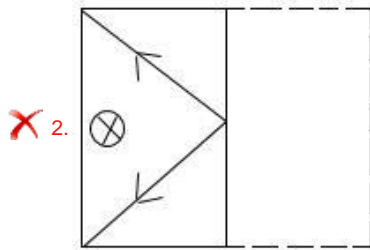
Q.1 How would the pattern given on the square transparent sheet marked 'X' look when the sheet is folded along the dotted line?

6



Ans





Question ID : 9895803848
Chosen Option : 4

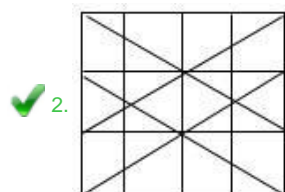
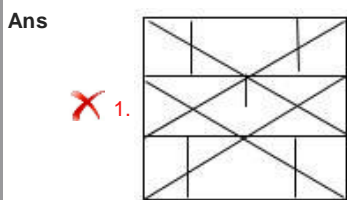
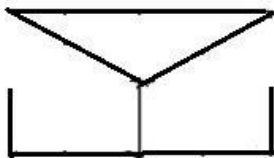
Q.1 7 Which two signs should be interchanged to make the following equation correct?

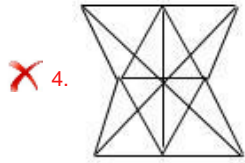
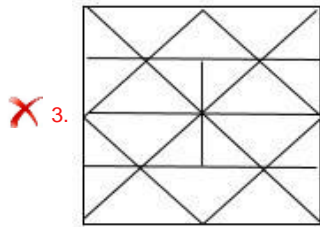
$$12 + 18 \times 24 \div 6 - 3 = 19$$

- Ans 1. \div and $+$
 2. $+$ and \times
 3. $-$ and \div
 4. \times and \div

Question ID : 9895803843
Chosen Option : 3

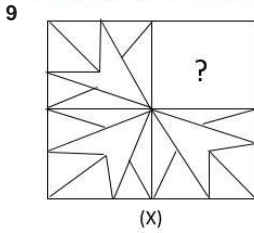
Q.1 8 Choose the figure from the options in which the given figure is embedded.



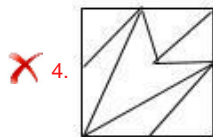
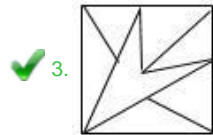
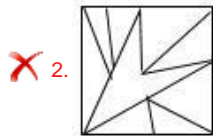
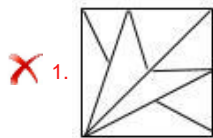


Question ID : 9895803847
Chosen Option : 1

Q.1 Select the figure which when placed in the blank space of the figure marked 'X' would complete the pattern.

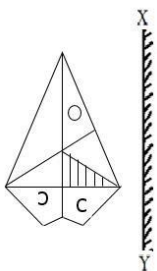


Ans



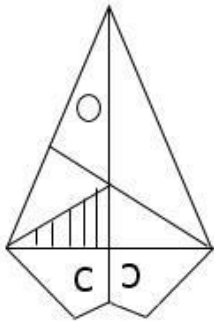
Question ID : 9895803845
Chosen Option : 4

Q.2 Choose the alternative which most closely resembles the mirror image of the given word when mirror is placed at XY line.

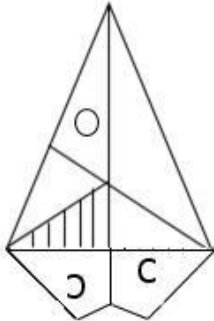


Ans

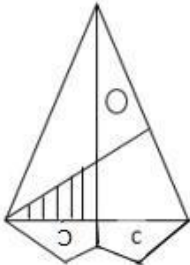
X 1.



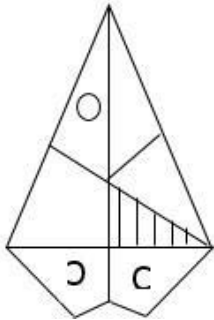
✓ 2.



X 3.



X 4.



Question ID : 9895803846
Chosen Option : 4

Q.2
1 TIME is related to CLOCK in the same way as DISTANCE is related to:

- Ans
- X 1. SPACE
 - X 2. KILOMETRE
 - X 3. DESTINATION
 - ✓ 4. ODOMETER

Question ID : 9895803828
Chosen Option : 2

Q.2
2 Pinky is taller than Priya but shorter than Reena. Riya is taller than Sheela, who is shorter than Priya. Reena is taller than Riya, who is taller than Pinky. Who is the shortest?

- Ans
- ✓ 1. Sheela
 - 2. Priya
 - 3. Riya

X 4. Pinky

Question ID : 9895803835
Chosen Option : 1

Q.2 The statement below is followed by three conclusions labeled I, II and III. You have to assume everything in the
3 statement to be true, and then decide which of the three suggested conclusions logically follows for pursuing.

Statements:

- 1.) No school is an institution.
- 2.) All establishments that are not institutions have buildings.

Conclusions:

- I. Schools are not establishments.
- II. All schools have buildings.
- III. Schools do not have buildings.

- Ans**
- X** 1. Only conclusion III follows
 2. Only conclusion II follows
 - X** 3. Either conclusion I or II follow
 4. Only conclusion I follows

Question ID : 9895803837
Chosen Option : --

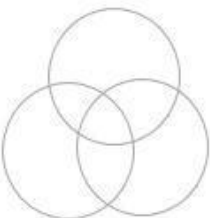
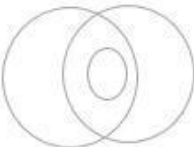
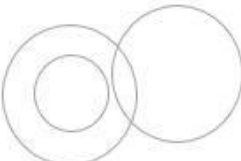
Q.2 P, Q, R, S, T and U are standing in a queue. Q is just ahead of P. S is just behind T. U is NOT near R, who is separated
4 from Q by two persons. Who is standing at the front of the queue?

- Ans**
- X** 1. Q
 - ✓** 2. R
 - X** 3. U
 - X** 4. T

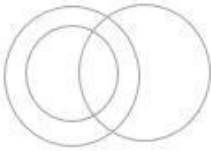
Question ID : 9895803834
Chosen Option : --

Q.2 Which of the following Venn diagrams correctly represents the relationships among the classes:
5 Women, Mothers, Engineers

Ans

- X** 1. 
- X** 2. 
- X** 3. 

✓ 4.



Question ID : 9895803849
Chosen Option : 4

Q.2 Who replaced Sachchidananda Sinha as Chairman of the Constituent Assembly of India?

6

- Ans
- 1. Mohandas Karamchand Gandhi
 - 2. Dr. Rajendra Prasad
 - 3. Sardar Vallabhbhai Patel
 - 4. Pt. Jawaharlal Nehru

Question ID : 9895805386
Chosen Option : --

Q.2 The objective of the 12th 5 Year Plan was _____.

7

- Ans
- 1. Reducting poverty and exploitation of women
 - 2. Growth with stability and progressive achievement
 - 3. Faster and more inclusive growth
 - 4. Faster, sustainable and more inclusive growth

Question ID : 9895805393
Chosen Option : 1

Q.2 The Finance Minister of India, in his budget speech announced the launching of the indigenously developed semi high-speed train named as _____.

8

- Ans
- 1. Vikramsheela Express
 - 2. Veer Jawan Express
 - 3. Vaicom Express
 - 4. Vande Bharat Express

Question ID : 9895805395
Chosen Option : 1

Q.2 Sanjhi, the paper craft is said to have originated in which of the following places of India?

9

- Ans
- 1. Indore
 - 2. Bhubaneshwar
 - 3. Mathura
 - 4. Coimbatore

Question ID : 9895805390
Chosen Option : --

Q.3 Why is it important to have iodised salt in our diet?

0

- Ans
- 1. It helps in smooth functioning of the thyroid gland
 - 2. It helps in building bones

3. It improves eyesight
4. It helps in gaining height

Question ID : 9895805405
Chosen Option : 1

Q.3
1 Fundamental duties were incorporated in the Indian Constitution by:

- Ans
1. 25th Amendment
 2. 56th Amendment
 3. 42nd Amendment
 4. 14th Amendment

Question ID : 9895805398
Chosen Option : 4

Q.3
2 Who played a decisive role in the integration of the princely states of India?

- Ans
1. TT Krishnamurthy
 2. Sardar Vallabhbhai Patel
 3. Motilal Nehru
 4. APJ Abdul Kalam

Question ID : 9895805396
Chosen Option : 2

Q.3
3 The Right to Property was deleted from the list of Fundamental Rights by which of the Amendment of Indian Constitution?

- Ans
1. 41st Amendment
 2. 42nd Amendment
 3. 44th Amendment
 4. 43rd Amendment

Question ID : 9895805397
Chosen Option : 2

Q.3
4 Milk becomes sour if kept outside the refrigerator in summers because of:

- Ans
1. the calcium present in it
 2. its colour
 3. the conversion of lactose sugar to lactic acid
 4. the breakdown of proteins

Question ID : 9895805407
Chosen Option : 3

Q.3
5 Where is the Konark Sun Temple situated?

- Ans
1. Tirupati
 2. Odisha
 3. Madurai

4. Kedarnath

Question ID : 9895805392
Chosen Option : 2

Q.3
6 Who called dams as the 'Temples of Modern India'?

- Ans 1. Pt. Jawaharlal Nehru
 2. Sardar Vallabhbhai Patel
 3. T Krishnanchari
 4. Mohandas Karamchand Gandhi

Question ID : 9895805403
Chosen Option : 3

Q.3
7 'Moonwalk', the famous dance move, is associated with:

- Ans 1. Misha Bryan
 2. Fred Astaire
 3. Michael Jackson
 4. Adele

Question ID : 9895805391
Chosen Option : 3

Q.3
8 Which is the first Indian state to start rooftop rainwater harvesting?

- Ans 1. Tamil Nadu
 2. Kerala
 3. Rajasthan
 4. Assam

Question ID : 9895805404
Chosen Option : 2

Q.3
9 Which of the following is not a Greenhouse gas?

- Ans 1. Carbon Dioxide
 2. Nitrous Oxide
 3. Methane
 4. Argon

Question ID : 9895805406
Chosen Option : 3

Q.4
0 Name the acid present in tamarind.

- Ans 1. Amino acid
 2. Citric acid
 3. Tartaric acid
 4. Lactic acid

Question ID : 9895805408

Q.4
1 Who was the first Indian woman player to reach the Olympics badminton singles quarterfinals?

- Ans
- 1. PV Sindhu
 - 2. Saina Nehwal
 - 3. Ashwini P
 - 4. Aparna Popat

Question ID : 9895805388
Chosen Option : 2

Q.4
2 The _____ movement was led by Muhammad Ali and Shaukat Ali.

- Ans
- 1. Sultaniya Movement
 - 2. Deoband Movement
 - 3. Badshahi Movement
 - 4. Khilafat Movement

Question ID : 9895805399
Chosen Option : 4

Q.4
3 Name the place where the Olympic Games originated?

- Ans
- 1. Latvia
 - 2. Aden
 - 3. Greece
 - 4. Baghdad

Question ID : 9895805387
Chosen Option : 3

Q.4
4 As per the interim Budget 2019, the 22nd AIIMS is proposed to come up in _____.

- Ans
- 1. Assam
 - 2. Haryana
 - 3. Jharkhand
 - 4. Maharashtra

Question ID : 9895805394
Chosen Option : 4

Q.4
5 Acidity in stomach after overeating can be remedied by consuming:

- Ans
- 1. lemon juice
 - 2. vegetables
 - 3. fruit juice
 - 4. baking soda

Question ID : 9895805389
Chosen Option : 1

6 The Lahore session of the Indian National Congress declared to celebrate 26th January as the Independence day in the year _____.

- Ans
- 1. 1920
 - 2. 1930
 - 3. 1942
 - 4. 1935

Question ID : 9895805400
Chosen Option : 3

Q.4 Who amongst the following founded the Bharatiya Jana Sangh (BJS) in 1977?
7

- Ans
- 1. Deen Dayal Upadhyaya
 - 2. Vinayak Savarkar
 - 3. Ashutosh Mukherjee
 - 4. Shyama Prasad Mukherjee

Question ID : 9895805384
Chosen Option : 2

Q.4 Robben Island, the world heritage site is associated to which of the following figures?
8

- Ans
- 1. John F. Kennedy
 - 2. Jimmy Carter
 - 3. Winston Churchill
 - 4. Nelson Mandela

Question ID : 9895805385
Chosen Option : 1

Q.4 Which of the following soils is found in the northern plains of India?
9

- Ans
- 1. Black soil
 - 2. Arid soil
 - 3. Alluvial soil
 - 4. Laterite soil

Question ID : 9895805402
Chosen Option : 3

Q.5 The Simon Commission which was sent by the British Government was boycotted because:
0

- Ans
- 1. It gave special powers to the Princely states.
 - 2. There were differences amongst the members.
 - 3. The Commission did not have any Indian member.
 - 4. The Commission curbed financial independence of India.

Question ID : 9895805401
Chosen Option : 1

Q.5 The area of a triangular park is equal to $5\sqrt{3}$ times the area of a triangular field with sides 18 m, 80 m and 82 m.
1

What is the side of the triangular park?

- Ans 1. 100 m
 2. 125 m
 3. 120 m
 4. 140 m

Question ID : 9895805705
Chosen Option : --

Q.5 Two numbers are in the ratio 5 : 6. If 16 is subtracted from each, the numbers will be in the ratio 3 : 4. If 8 is added to the first number and 3 is subtracted from the second, then they will be in the ratio:

- Ans 1. 15 : 16
 2. 13 : 14
 3. 14 : 13
 4. 16 : 15

Question ID : 9895805699
Chosen Option : 3

Q.5 Suman sold an article for 882 after allowing 16% discount on its marked price. Had she not allowed any discount, she would have gained 20% on the cost price. What is the cost price of the article?

- Ans 1. 875
 2. 750
 3. 850
 4. 725

Question ID : 9895805695
Chosen Option : --

Q.5 The curved surface area of a right circular cylinder of height 28 cm is 176 cm^2 . The volume (in cm^3) of cylinder is
4 (Take $\pi = \frac{22}{7}$)

- Ans 1. 176
 2. 66
 3. 110
 4. 88

Question ID : 9895805706
Chosen Option : --

Q.5 A person covered a distance of 250 km at a certain speed. If his speed is 20% less, he would have covered the same distance in $1\frac{1}{4}$ hours less time. His speed (in km/hr), initially was:

- Ans 1. 50
 2. $47\frac{1}{2}$
 3. $52\frac{1}{2}$
 4. 45

Question ID : 9895805709
Chosen Option : 2

Q.5
6

Study the following table and answer questions:

Number of students studying in five schools of a city

Schools	No of Students	Ratio of boys and girls Boys : Girls
A	680	9 : 8
B	720	4 : 5
C	540	5 : 13
D	660	2 : 1
E	900	13 : 12

The total number of girls in schools B and C is what percent less than the total number of boys in schools A and D?

- Ans 1. 1.25
 2. 11.25
 3. 4
 4. 10

Question ID : 9895805714
Chosen Option : 2

Q.5 Working together, A, B and C can complete a work in 36 days. If the efficiency of A, B and C are in the ratio 5 : 6 : 9, then B alone will complete the same work in:

- Ans 1. 90 days
 2. 100 days
 3. 60 days
 4. 120 days

Question ID : 9895805710
Chosen Option : 1

Q.5 The compound interest on a certain sum at a certain rate percent per annum for the second year and the third year are ₹3300 and ₹3630, respectively. The sum is:

- Ans 1. ₹25000
 2. ₹32000
 3. ₹30000
 4. ₹28400

Question ID : 9895805703
Chosen Option : 1

Q.5 A boat can cover 36 km downstream and 16 km upstream in 10 hours. It can cover 3 km downstream and 1.2 km upstream in 48 minutes. What is the speed (in km/hr) of the boat when going upstream?

- Ans 1. 2
 2. 4
 3. 2.5
 4. 3.5

Question ID : 9895805708
Chosen Option : 1

Q.6 Let x be the greatest number such that when 12085, 16914 and 13841 are divided by it, the remainder in each case is 0 same. The sum of digits of x is:

- Ans 1. 13
 2. 19
 3. 16
 4. 14

Question ID : 9895805690
Chosen Option : 1

Q.6 The average weight of a certain number of persons in a group was 75.5 kg. Later on, 4 persons weighing 72.6 kg, 74 kg, 73.4 kg and 70 kg joined the group. As a result, the average weight of all persons in the group reduced by 500g. The number of persons in the group, initially, was:

- Ans
- 1. 24
 - 2. 16
 - 3. 18
 - 4. 20

Question ID : 9895805693
Chosen Option : 1

Q.6 The value of $[0.08 \div 1.2 \text{ of } (3.4 - 2.6) \times 0.8 \text{ of } 3.2]$ of $\frac{9}{16}$ lies between :

- Ans
- 1. 0.09 and 0.11
 - 2. 0.11 and 0.13
 - 3. 0.07 and 0.09
 - 4. 0.13 to 0.15

Question ID : 9895805692
Chosen Option : 1

Q.6 The simple interest on a certain sum in $5\frac{1}{2}$ years at 6% p.a. is ₹2541. What will be the amount of the same sum in $5\frac{2}{3}$ years at $8\frac{1}{7}$ % p.a.?

- Ans
- 1. ₹12153
 - 2. ₹11253
 - 3. ₹13125
 - 4. ₹11235

Question ID : 9895805702
Chosen Option : 1

Q.6 Study the following table and answer questions:

Number of students studying in five schools of a city

Schools	No of Students	Ratio of boys and girls Boys : Girls
A	680	9 : 8
B	720	4 : 5
C	540	5 : 13
D	660	2 : 1
E	900	13 : 12

The ratio of the number of boys in school A to the number of girls in school E is:

- Ans
- 1. 3 : 4
 - 2. 5 : 12
 - 3. 8 : 13
 - 4. 5 : 6

Question ID : 9895805712
Chosen Option : 1

Q.6 The average of 41 numbers is 63. The average of first 21 number is 61.5 and that of last 21 numbers is 65.5. if 21st number is excluded then the average of remaining numbers is:

- Ans
- 1. 62.5
 - 2. 63.575
 - 3. 63.5
 - 4. 62.475

Question ID : 9895805694
Chosen Option : 3

Q.6 A sum of ₹4107 is divided between A, B, C and D such that the ratio of shares of A and B is 3 : 4, that of B and C is 2 : 1 and that of C and D is 3 : 5. The share of B is:

- Ans
- 1. ₹1443
 - 2. ₹1332
 - 3. ₹1003
 - 4. ₹1223

Question ID : 9895805700
Chosen Option : 4

Q.6 A sold an article to B at 25% profit. B sold it to C at a profit of 10% and C sold it to D at 40% loss. If D bought it for ₹46.20, then the difference between the profits of A and B is:

- Ans
- 1. ₹8.50
 - 2. ₹15
 - 3. ₹6
 - 4. ₹7

Question ID : 9895805696
Chosen Option : 2

Q.6 Two solutions of acid and water containing acid and water in the ratio 2 : 7 and 4 : 5, respectively are mixed in the ratio 8 : 5. What is the ratio of acid and water in the resulting solution?

- Ans
- 1. 8 : 17
 - 2. 8 : 13
 - 3. 2 : 1
 - 4. 3 : 7

Question ID : 9895805701
Chosen Option : 2

Q.6 A person sells a watch at a profit of 26%. If he had bought it at 20% less and sold for ₹81.60 less, he would have gained 32%. What is the original cost price (in ₹) of the watch?

- Ans
- 1. 400
 - 2. 450
 - 3. 360
 - 4. 480

Question ID : 9895805697
Chosen Option : 2

Q.7
0 The value of $\frac{1\frac{2}{3} + \left[16\frac{1}{2} - \left\{ 1\frac{1}{10} \left(3\frac{1}{3} + 5 \right) \right\} \right]}{\frac{1}{4} \text{ of } 2\frac{1}{2} + \frac{3}{5} \times 4\frac{4}{5}}$ is:

Ans

1. $1\frac{2}{5}$

2. $3\frac{2}{5}$

3. $3\frac{1}{5}$

4. $1\frac{4}{5}$

Question ID : 9895805691
Chosen Option : 1

Q.7
1 What is the mean of the range, median and mode of the data:

2, 3, 1, 1, 3, 4, 2, 1, 1, 4, 5, 2, 4, 2, 2, 1, 3, 3, 2, 5

Ans

1. 4

2. $3\frac{1}{3}$

3. $2\frac{2}{3}$

4. $4\frac{1}{2}$

Question ID : 9895805704
Chosen Option : 3

Q.7
2 When 32% of a number x was added to another number y , then y increases by 24%. The value of $\frac{(2x+y)}{(3x-y)}$ is:

Ans

1. 3

2. 2

3. 1

4. 8

Question ID : 9895805698
Chosen Option : 1

Q.7
3 If the radius of a sphere is decreased by 25%, then the percentage decrease in its surface area is:

Ans

1. 43.75

2. 37.50

3. 40

4. 42

Question ID : 9895805707
Chosen Option : 3

Q.7
4 Two pipes A and B can fill a tank in 12 minutes and 15 minutes, respectively. When an outlet pipe C is also opened, then the three pipes together can fill the tank in 10 minutes. In how many minutes can C alone empty the full tank?

Ans

1. 20

2. 24

3. 16

4. 18

Q.7
5 Study the following table and answer questions:

Number of students studying in five schools of a city

Schools	No of Students	Ratio of boys and girls Boys : Girls
A	680	9 : 8
B	720	4 : 5
C	540	5 : 13
D	660	2 : 1
E	900	13 : 12

In how many schools, the number of girls is more than the average number of boys per school?

- Ans
- 1. 4
 - 2. 1
 - 3. 2
 - 4. 3

Section : English Language

Q.1 Select the most appropriate option to fill in the blank.

Scientists tried to find out the _____ behind the occurrence of the phenomenon.

- Ans
- 1. illustration
 - 2. interpretation
 - 3. clarification
 - 4. cause

Q.2 Select the most appropriate option to substitute the underlined segment in the given sentence. If there is no need to substitute it, select No improvement.

The Indian forces are known for their bravery.

- Ans
- 1. force are known for
 - 2. forces is known for
 - 3. No improvement
 - 4. forces are known of

Q.3 From the given options, identify the segment in the sentence which contains the grammatical error.

Dr. Rana is our teacher of English since this semester.

- Ans
- 1. this semester.
 - 2. Dr. Rana is
 - 3. our teacher
 - 4. of English since

Q.4 Select the synonym of the given word.

NOMADIC

- Ans 1. Brave
 2. Roving
 3. Wild
 4. Barbaric

Q.5 From the given options, identify the segment in the sentence which contains the grammatical error.

Nowadays spectacles are costly than they used to be.

- Ans 1. costly than
 2. Nowadays
 3. they used to be.
 4. spectacles are

Q.6 Select the most appropriate word to fill in the blank.

Dinosaurs are an _____ species now.

- Ans 1. age-old
 2. extinct
 3. antique
 4. ancient

Q.7 Select the antonym of the given word.

LATENT

- Ans 1. Forbidding
 2. Artificial
 3. Hidden
 4. Obvious

Q.8 Select the synonym of the given word.

HANDY

- Ans 1. Funny
 2. Nice
 3. Convenient
 4. Easy

Question ID : 9895805245
Chosen Option : 1

Q.9 Select the correctly spelt word.

- Ans 1. Acommodate
 2. Accommadate
 3. Accommodate
 4. Accomodate

Question ID : 9895805253
Chosen Option : --

Q.1 Select the most appropriate option to substitute the underlined segment in the given sentence. If there is no need to substitute it, select No improvement.

We should offer due respects to all elderly persons.

- Ans 1. offer due respects for
 2. No improvement
 3. offer due respect to
 4. offers due respects to

Question ID : 9895805234
Chosen Option : 2

Q.1 Select the word which means the same as the group of words given.

Something which gets broken easily

- Ans 1. Weak
 2. Soft
 3. Feeble
 4. Fragile

Question ID : 9895805251
Chosen Option : 1

Q.1 Select the most appropriate option to fill in the blank.

The baby bird was _____ by its mother.

- Ans 1. thrown
 2. renounced
 3. sacrificed
 4. abandoned

Question ID : 9895805236
Chosen Option : 2

Q.1
3 Select the option that means the same as the given idiom.

A stone's throw away

- Ans 1. At a short distance
 2. Very far off
 3. At a remote location
 4. Many miles away

Question ID : 9895805248
Chosen Option : 1

Q.1
4 Select the antonym of the given word.

MALEVOLENT

- Ans 1. Well-mannered
 2. Positive
 3. Kind
 4. Cruel

Question ID : 9895805247
Chosen Option : 4

Q.1
5 Select the most appropriate option to substitute the underlined segment in the given sentence. If there is no need to substitute it, select No improvement.

Regular exercise lead to fitness of the body.

- Ans 1. will leads to fitness of the body
 2. leads to fitness of the body
 3. No improvement
 4. leading to fitness of the body

Question ID : 9895805235
Chosen Option : 3

Q.1
6 From the given options, identify the segment in the sentence which contains the grammatical error.

We must visit this ancient temple which are a hundred years old.

- Ans 1. this ancient temple
 2. a hundred years old.
 3. which are
 4. We must visit

Question ID : 9895805230
Chosen Option : 2

Comprehension:

In the following passage some words have been deleted. Fill in the blanks with the help of the alternatives given.

The neglect of one half of mankind costs the world a great deal both, in economic and social (1) _____. A family (2) _____ an educated mother is, in most cases, a poorer family than one in which everyone is educated and can (3) _____ a living. A family with an uneducated mother may (4) _____ in other ways too, because the mother is (5) _____ to help the children in their education.

SubQuestion No : 17

Q.1
7 Select the most appropriate option that will fill in the blank number 1.

- Ans
- 1. areas
 - 2. values
 - 3. terms
 - 4. aspects

Question ID : 9895805239
Chosen Option : --

Comprehension:

In the following passage some words have been deleted. Fill in the blanks with the help of the alternatives given.

The neglect of one half of mankind costs the world a great deal both, in economic and social (1) _____. A family (2) _____ an educated mother is, in most cases, a poorer family than one in which everyone is educated and can (3) _____ a living. A family with an uneducated mother may (4) _____ in other ways too, because the mother is (5) _____ to help the children in their education.

SubQuestion No : 18

Q.1
8 Select the most appropriate option that will fill in the blank number 2.

- Ans
- 1. of
 - 2. without
 - 3. including
 - 4. with

Question ID : 9895805240
Chosen Option : 4

Comprehension:

In the following passage some words have been deleted. Fill in the blanks with the help of the alternatives given.

The neglect of one half of mankind costs the world a great deal both, in economic and social (1) _____. A family (2) _____ an educated mother is, in most cases, a poorer family than one in which everyone is educated and can (3) _____ a living. A family with an uneducated mother may (4) _____ in other ways too, because the mother is (5) _____ to help the children in their education.

SubQuestion No : 19

Q.1
9 Select the most appropriate option that will fill in the blank number 3.

- Ans
- 1. create
 - 2. manage
 - 3. plan
 - 4. earn

Question ID : 9895805241
Chosen Option : --

Comprehension:

In the following passage some words have been deleted. Fill in the blanks with the help of the alternatives given.

The neglect of one half of mankind costs the world a great deal both, in economic and social (1) _____. A family (2) _____ an educated mother is, in most cases, a poorer family than one in which everyone is educated and can (3) _____ a living. A family with an uneducated mother may (4) _____ in other ways too, because the mother is (5) _____ to help the children in their education.

SubQuestion No : 20

Q.2
0 Select the most appropriate option that will fill in the blank number 4.

- Ans
- 1. destroy
 - 2. prosper
 - 3. fail
 - 4. suffer

Question ID : 9895805242
Chosen Option : --

Comprehension:

In the following passage some words have been deleted. Fill in the blanks with the help of the alternatives given.

The neglect of one half of mankind costs the world a great deal both, in economic and social (1) _____. A family (2) _____ an educated mother is, in most cases, a poorer family than one in which everyone is educated and can (3) _____ a living. A family with an uneducated mother may (4) _____ in other ways too, because the mother is (5) _____ to help the children in their education.

SubQuestion No : 21

Q.2
1 Select the most appropriate option that will fill in the blank number 5.

- Ans
- 1. unable
 - 2. eligible
 - 3. qualified
 - 4. able

Q.2
2 Select the word which means the same as the group of words given.

One who speaks many languages

- Ans
1. Multilingual
 2. Monolingual
 3. Linguist
 4. Bilingual

Q.2
3 Select the most appropriate word to fill in the blank.

Apart from cows, buffaloes are also _____ for mass milk production for humans.

- Ans
- ✓ 1. reared
 2. produced
 3. developed
 - ✗ 4. grown

Q.2
4 Select the correctly spelt word.

- Ans
1. Exeggeration
 2. Exaggeration
 3. Exaggaration
 4. Exageration

Q.2
5 Select the option that means the same as the given idiom.

The grass is greener on the other side

- Ans
1. Only green grass grows well
 2. Things appear better for others
 3. Green grass grows everywhere
 4. Many things looks like green grass

दिए गए शब्द का विलोम चुनें।

मौन

Ans

1. चुप
2. स्वरचित
3. कंठस्थ
4. मुखर

Question ID : 9895805553
Chosen Option : --

Q.2 दिए गए वाक्य में रेखांकित खंड को प्रतिस्थापित करने के लिए उपयुक्त विकल्प का चयन करें।

तुम्हारे गुरु तुमकी प्रार्थना स्वीकार कर सकते हैं, परन्तु हम नहीं।

Ans

- ✓ 1. तुम प्रार्थना
2. तुम्हारी प्रार्थना
3. तुझे प्रार्थना
4. तुमसे प्रार्थना

Question ID : 9895805541
Chosen Option : --

Q.3 रिक्त स्थान को भरने के लिए उपयुक्त शब्द का चयन करें।

सबने _____ बजाई।

Ans

- ✗ 1. बाजा
2. तालियाँ
3. बोलियाँ
- ✗ 4. गाल

Question ID : 9895805545
Chosen Option : --

Q.4 दिए गए शब्द के पर्यायवाची शब्द का चयन करें।

राष्ट्र

Ans

1. संसार
- ✗ 2. बाहर
3. देश
4. धरती

Question ID : 9895805554
Chosen Option : --

Q.5 सही वर्तनी वाले शब्द का चयन करें।

- Ans 1. बनवास
 2. वनवाश
 3. वनबास
 4. वनवास

Question ID : 9895805561
Chosen Option : --

Q.6 दिए गए शब्द का विलोम चुनें।

दूषित

- Ans 1. स्वच्छ
 2. भ्रष्ट
 3. प्रदूषित
 4. विकृत

Question ID : 9895805552
Chosen Option : --

Q.7 दिये गये वाक्यांश के लिए एक शब्द दीजिये।

जो कम बोलता हो

- Ans 1. वाचाल
 2. मितभाषी
 3. मूक
 4. मितव्ययी

Question ID : 9895805558
Chosen Option : --

Q.8 दिए गए वाक्य का वह भाग ज्ञात करें जिसमें कोई त्रुटि है।

कभी न कभी इस भ्रष्टाचार के विरुद्ध हमें आवाज उठानी होगा।

- Ans 1. इस भ्रष्टाचार के
 2. आवाज उठानी होगा।
 3. विरुद्ध हमें
 4. कभी न कभी

Question ID : 9895805538
Chosen Option : --

Q.9 दिए गए शब्द के पर्यायवाची शब्द का चयन करें।

मरुस्थल

- Ans 1. धूल
 2. ऊँट

3. रेगिस्तान

4. रेत

Question ID : 9895805555
Chosen Option : --

Q.1 निम्नलिखित में से उस विकल्प का चयन करें जो 'थाली का बैंगन' मुहावरे का अर्थ व्यक्त करता है।

Ans

1. घमंडी व्यक्ति
2. सिद्धांतवादी व्यक्ति
3. सिद्धांतरहित व्यक्ति
4. इधर की बात उधर करने वाला व्यक्ति

Question ID : 9895805556
Chosen Option : --

Q.1 रिक्त स्थान को भरने के लिए उपयुक्त शब्द का चयन करें।

जो करे वह _____।

Ans

1. मरे
2. सोये
3. भरे
4. जागे

Question ID : 9895805544
Chosen Option : --

Q.1 दिए गए वाक्य का वह भाग ज्ञात करें जिसमें कोई त्रुटि है।

सब्जियाँ इतनी महँगी हैं कि उन्हें खरीदते हुए ग्राहक को सोचना पड़ना रहा है।

Ans

1. सोचना पड़ना रहा है।
2. सब्जियाँ इतनी महँगी हैं कि
3. ग्राहक को
4. उन्हें खरीदते हुए

Question ID : 9895805537
Chosen Option : --

Q.1 सही वर्तनी वाले शब्द का चयन करें।

Ans

1. रसोइघर
2. रसौईघर
3. रसोईघर
4. रसौइघर

Q.1
4 रिक्त स्थान को भरने के लिए उपयुक्त शब्द का चयन करें।

बोलने के पहले _____ करो।

- Ans
1. पिया
 - ✓ 2. खाया
 3. सोचा
 4. सोया

Q.1
5 दिए गए वाक्य में रेखांकित खंड को प्रतिस्थापित करने के लिए उपयुक्त विकल्प का चयन करें।

मुझे जिस वस्तु की आवश्यकता है यह वस्तु तुम मुझे दे देना।

- Ans
- ✗ 1. यही वस्तु तुम मुझे दे देना।
 2. वह वस्तु तुम मुझे दे देना।
 3. उस वस्तु तुम मुझे दे देना।
 4. वह वस्तु तुम मेरे को दे देना।

Q.1
6 निम्नलिखित में से उस विकल्प का चयन करें जो 'दंग रह जाना' मुहावरे का अर्थ व्यक्त करता है।

- Ans
- ✓ 1. बदल जाना
 2. नाराज़ हो जाना
 3. परेशान हो जाना
 4. चकित हो जाना

Q.1
7 दिए गए वाक्य में रेखांकित खंड को प्रतिस्थापित करने के लिए उपयुक्त विकल्प का चयन करें।

मिठाईयाँ लेकर विजय बाबू घर चला गया।

- Ans
1. घर चले गया।
 2. घर चले गए।
 3. घर गए चले।
 4. घर चली गयी।

रिक्त स्थान को भरने के लिए उपयुक्त शब्द का चयन करें।

राजीव छत _____ सो रहा है।

- Ans 1. पर
 2. से
 3. अंदर
 4. में

Question ID : 9895805542
Chosen Option : --

Comprehension:

निम्नलिखित गद्यांश के रिक्त स्थानों की पूर्ति गद्यांश के नीचे दिए गए प्रश्नों के अनुसार कीजिए -

संगीत के बारे में प्रायः जन साधारण की यह _____ (1) है कि यह मन बहलाने अथवा _____ (2) का साधन है, अथवा भजन-पूजन में कविताएँ एवं छंद आदि भगवान के गुणगान की वस्तुएँ हैं। वस्तुतः _____ (3) के और भी उपयोग हैं। यह _____ (4) ही नहीं, मूक पशु-पक्षियों तक की _____ (5) को प्रेरित करने में सक्षम है। मनुष्य समझदार होने के कारण और भी अधिक लाभान्वित होता है।

SubQuestion No : 19

Q.1
9 गद्यांश में संकेतित रिक्त स्थान (1) के लिए उपयुक्त शब्द होगा -

- Ans 1. मान्यता
 2. धरती
 3. साधन
 4. गायन

Question ID : 9895805547
Chosen Option : --

Comprehension:

निम्नलिखित गद्यांश के रिक्त स्थानों की पूर्ति गद्यांश के नीचे दिए गए प्रश्नों के अनुसार कीजिए -

संगीत के बारे में प्रायः जन साधारण की यह _____ (1) है कि यह मन बहलाने अथवा _____ (2) का साधन है, अथवा भजन-पूजन में कविताएँ एवं छंद आदि भगवान के गुणगान की वस्तुएँ हैं। वस्तुतः _____ (3) के और भी उपयोग हैं। यह _____ (4) ही नहीं, मूक पशु-पक्षियों तक की _____ (5) को प्रेरित करने में सक्षम है। मनुष्य समझदार होने के कारण और भी अधिक लाभान्वित होता है।

SubQuestion No : 20

Q.2
0 गद्यांश में संकेतित रिक्त स्थान (2) के लिए उपयुक्त शब्द होगा -

Ans

1. धरती
2. मनोरंजन
3. भरपूर
4. विश्व

Question ID : 9895805548
Chosen Option : --

Comprehension:

निम्नलिखित गद्यांश के रिक्त स्थानों की पूर्ति गद्यांश के नीचे दिए गए प्रश्नों के अनुसार कीजिए -

संगीत के बारे में प्रायः जन साधारण की यह _____ (1) है कि यह मन बहलाने अथवा _____ (2) का साधन है, अथवा भजन-पूजन में कविताएँ एवं छंद आदि भगवान के गुणगान की वस्तुएँ हैं। वस्तुतः _____ (3) के और भी उपयोग हैं। यह _____ (4) ही नहीं, मूक पशु-पक्षियों तक की _____ (5) को प्रेरित करने में सक्षम है। मनुष्य समझदार होने के कारण और भी अधिक लाभान्वित होता है।

SubQuestion No : 21

Q.2
1 गद्यांश में संकेतित रिक्त स्थान (3) के लिए उपयुक्त शब्द होगा -

Ans

1. तबला
2. मृदंग
3. पुस्तक
4. संगीत

Comprehension:

निम्नलिखित गद्यांश के रिक्त स्थानों की पूर्ति गद्यांश के नीचे दिए गए प्रश्नों के अनुसार कीजिए -

संगीत के बारे में प्रायः जन साधारण की यह _____ (1) है कि यह मन बहलाने अथवा _____ (2) का साधन है, अथवा भजन-पूजन में कविताएँ एवं छंद आदि भगवान के गुणगान की वस्तुएँ हैं। वस्तुतः _____ (3) के और भी उपयोग हैं। यह _____ (4) ही नहीं, मूक पशु-पक्षियों तक की _____ (5) को प्रेरित करने में सक्षम है। मनुष्य समझदार होने के कारण और भी अधिक लाभान्वित होता है।

SubQuestion No : 22

Q.2
2 गद्यांश में संकेतित रिक्त स्थान (4) के लिए उपयुक्त शब्द होगा -

- Ans
1. मनुष्य
 2. घृणा
 - ✓ 3. आकाश
 - ✗ 4. पानी

Comprehension:

निम्नलिखित गद्यांश के रिक्त स्थानों की पूर्ति गद्यांश के नीचे दिए गए प्रश्नों के अनुसार कीजिए -

संगीत के बारे में प्रायः जन साधारण की यह _____ (1) है कि यह मन बहलाने अथवा _____ (2) का साधन है, अथवा भजन-पूजन में कविताएँ एवं छंद आदि भगवान के गुणगान की वस्तुएँ हैं। वस्तुतः _____ (3) के और भी उपयोग हैं। यह _____ (4) ही नहीं, मूक पशु-पक्षियों तक की _____ (5) को प्रेरित करने में सक्षम है। मनुष्य समझदार होने के कारण और भी अधिक लाभान्वित होता है।

SubQuestion No : 23

Q.3
3 गद्यांश में संकेतित रिक्त स्थान (5) के लिए उपयुक्त शब्द होगा -

- Ans
- ✗ 1. स्वाद
 - ✗ 2. घ्राण

3. भावनाओं

4. रोग

Question ID : 9895805551
Chosen Option : --

Q.2
4 दिये गये वाक्यांश के लिए एक शब्द दीजिये।

जो सब कुछ जानता हो

Ans

1. मर्मज्ञ

2. कर्मज्ञ

3. सर्वज्ञ

4. अल्पज्ञ

Question ID : 9895805559
Chosen Option : --

Q.2
5 दिए गए वाक्य का वह भाग ज्ञात करें जिसमें कोई त्रुटि है।

वन प्रकृति की देन हैं, वे देश से सुंदरता में वृद्धि करते हैं।

Ans

1. वन प्रकृति की देन हैं,

2. वे देश से

3. वृद्धि करते हैं।

4. सुंदरता में

Question ID : 9895805536
Chosen Option : --