

**SSC
GD**

Previous Year Paper
18 Nov 2021 Shift 1

Exam Date	18/11/2021
Exam Time :	9:00 AM - 10:30 AM
Subject	Constable GD 2021

Section : Part A General Intelligence and Reasoning

Q.1 Select the number from among the given options that can replace the question mark (?) in the following series.

38, 42, 58, 94, ?, 258

- Ans
- 1. 164
 - 2. 108
 - 3. 152
 - 4. 158

Question ID : 65497833684
Status : Answered
Chosen Option : 4


Q.2 उस विकल्प का चयन करें जो तीसरे अक्षर-समूह से उसी प्रकार संबंधित है, जिस प्रकार दूसरा अक्षर-समूह पहले अक्षर-समूह से संबंधित है।

DHM : GCX :: KOT : ?

- Ans
- 1. NJE
 - 2. NHD
 - 3. NIE
 - 4. NKL

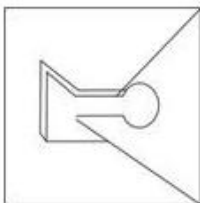
Question ID : 65497833686
Status : Answered
Chosen Option : 1

Q.3 उस विकल्प का चयन करें जिसमें दी गई आकृति अंतर्निहित है (घुमाने की अनुमति नहीं है)।

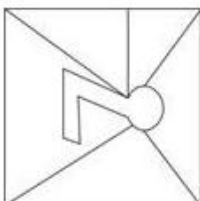


Ans

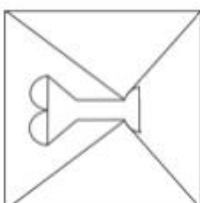
✗ 1.



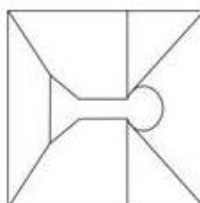
✗ 2.



✗ 3.



✓ 4.



Question ID : 65497833677

Status : Answered

Chosen Option : 4

Q.4 उन अक्षरों के संयोजन का चयन करें जिसे दी गई श्रृंखला के रिक्त स्थान में क्रमिक रूप से रखे जाने पर श्रृंखला पूर्ण होगी।

P E _ _ L E P _ _ P L E _ _ O P _ _

Ans ✗ 1. OPEOPLEE

✗ 2. OPOEPELE

✓ 3. OPEOPELE

✗ 4. OPOEEPLE

Question ID : 65497833690

Status : Answered

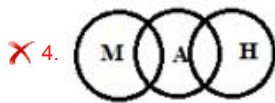
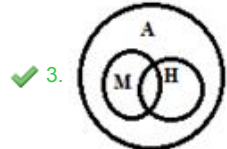
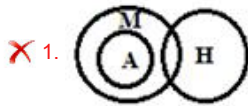
Chosen Option : 3

Q.5 Select the Venn diagram that best represents the relationship between the following classes.

Human, Male, Animal

(H: Human; M: Male; A: Animal)

Ans



Question ID : 65497833681

Status : Answered

Chosen Option : 1

Q.6 दिए गए विकल्पों में से उस अक्षर-समूह का चयन कीजिए जो निम्न श्रृंखला में प्रश्नवाचक चिह्न (?) के स्थान पर आ सकता है।

YEM, BHP, EKS, HNV, ?

Ans ✓ 1. KQY

✗ 2. KRX

✗ 3. LNU

✗ 4. KPZ

Question ID : 65497833678

Status : Answered

Chosen Option : 1

Q.7 Read the given statements and conclusions carefully. Assuming that the information given in the statements is true, even if it appears to be at variance with commonly known facts, decide which of the given conclusions logically follow(s) from the statements.

Statements:

All kites are planes.

All planes are papers.

Conclusions:

I. All kites are papers.

II. No paper is a plane.

Ans ✗ 1. Neither conclusion I nor II follows

✗ 2. Both conclusions I and II follow

✗ 3. Only conclusion II follows

✓ 4. Only conclusion I follows

Question ID : 65497833694

Status : Answered

Chosen Option : 4

Q.8 Six friends, A, B, C, D, E and F, are sitting opposite to each other in a circle, facing towards the centre. C and D are adjacent to each other. Also, B and F are adjacent to each other. E is sitting opposite to B. F is sitting to the left of B. Who is sitting between E and F?

Ans 1. A

2. F

3. E

4. B

Question ID : 65497833680

Status : Answered

Chosen Option : 1

Q.9 'cloth' is related to 'Cotton' in the same way as 'Flour' is related to '_____'.
Ans 1. Food

2. Chapatti

3. Wheat

4. Tiles

Question ID : 65497833679

Status : Answered

Chosen Option : 3

Q.10 In a certain code language, REMAIN is coded as 92214261813. How will MACHINE be coded in that language?
Ans 1. 131389145

2. 14262419181322

3. 22131819242614

4. 514981313

Question ID : 65497833683

Status : Answered

Chosen Option : 2

Q.11 If, $5 + 7 = 473 + 8 = 359 + 2 = 29$ then, $7 + 4 = ?$
Ans 1. 42

2. 45

3. 37

4. 39

Question ID : 65497833696

Status : Not Answered

Chosen Option : --

Q.12 Study the given pattern carefully and select the number that can replace the question mark (?) in it.

7 343 3
5 ? 4
2 256 8

- Ans 1. 225
 2. 250
 3. 525
 4. 625

Question ID : 65497833695
Status : Answered
Chosen Option : 4

Q.13 उस विकल्प का चयन करें जो तीसरी संख्या से उसी प्रकार संबंधित है जिस प्रकार दूसरी संख्या पहली संख्या से संबंधित है।

7 : 56 :: 13 : ?

- Ans 1. 92
 2. 78
 3. 67
 4. 104

Question ID : 65497833674
Status : Answered
Chosen Option : 4

Q.14 Six friends, Ravi, Kavya, Mahima, Gita, Mohan and Neha, are sitting in a straight line, all facing the north. Kavya is not sitting at either of the ends. Neha is sitting between Ravi and Mohan. Mohan is sitting to the immediate right of Gita. There are three friends sitting between Ravi and Kavya. Kavya is sitting to the immediate right of Mahima. Who is sitting at the fifth position from the left end?

- Ans 1. Gita
 2. Neha
 3. Kavya
 4. Mohan

Question ID : 65497833673
Status : Answered
Chosen Option : 3

Q.15 Which two numbers (NOT digits) should be interchanged to make the given equation correct?

$$5 \times 40 \div 8 + 3 - 14 = 53$$

- Ans 1. 8 and 14
 2. 5 and 3
 3. 5 and 8
 4. 8 and 3

Question ID : 65497833675
Status : Answered
Chosen Option : 3

Q.16 Select the correct option that indicates the arrangement of the given words in the order in which they appear in an English dictionary.

1. Goffer
2. Goblin
3. Goatling
4. Goatish
5. Goer

- Ans
- 1. 4, 2, 3, 5, 1
 - 2. 4, 3, 2, 5, 1
 - 3. 4, 3, 5, 2, 1
 - 4. 4, 2, 5, 3, 1

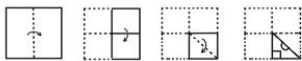
Question ID : 65497833689
Status : Answered
Chosen Option : 2

Q.17 In a certain code language, 'LECTURE' is written as 'MGFXZXL' and 'TEACHER' is written as 'UGDGMKY'. How will 'STUDENT' be written in that language?

- Ans
- 1. TVXJHTA
 - 2. TVWHJTA
 - 3. TVXHJTA
 - 4. TVVJHTA

Question ID : 65497833687
Status : Answered
Chosen Option : 3

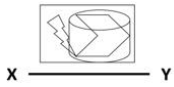
Q.18 The sequence of folding a piece of paper and the manner in which the folded paper has been cut is shown in the following figures. How would this paper look when unfolded?



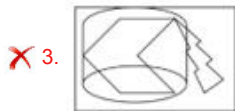
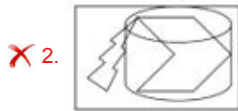
- Ans
- 1.
 - 2.
 - 3.
 - 4.

Question ID : 65497833697
Status : Answered
Chosen Option : 3

Q.19 दिए गए संयोजन के सही दर्पण प्रतिबिंब का चयन करें, जब दर्पण को दिखाए गए अनुसार XY पर रखा गया है।



Ans



Question ID : 65497833685

Status : Answered

Chosen Option : 2

Q.20 चार अक्षर-समूह दिए गए हैं जिनमें से तीन किसी तरीके से समान हैं और एक भिन्न है। भिन्न अक्षर-समूह को चुनिए।

Ans ✓ 1. NTD

✗ 2. RTI

✗ 3. QSJ

✗ 4. EGV

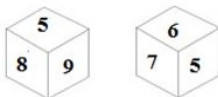
Question ID : 65497833682

Status : Answered

Chosen Option : 1

Q.21 Two different positions of the same dice marked with the numbers 4, 5, 6, 7, 8 and 9 are shown.

Select the number that will be on the face opposite to the face having the number '9'.



Ans ✗ 1. 8

✗ 2. 6

✓ 3. 7

✗ 4. 4

Question ID : 65497833676

Status : Answered

Chosen Option : 3

Q.22 विकल्पों से वह चित्र चुनें जिसे प्रश्न चिह्न (?) के स्थान पर रखा जा सकता है और दिए गए पैटर्न को पूरा किया जा सकता है (धुमने की अनुमति नहीं है)।



Ans



Question ID : 65497833692

Status : Answered

Chosen Option : 4

Q.23 In a certain code language, 'BOOK' is written as 'CRTR'. How will 'PETROL' be written in that language?

- Ans ✗ 1. QIXYYW
✓ 2. QHYXXW
✗ 3. HYXXW
✗ 4. QHXYXW

Question ID : 65497833693

Status : Answered

Chosen Option : 2

Q.24 दिए गए विकल्पों में से वह संख्या चुनें जिसे नीचे दी गई श्रृंखला में प्रश्न चिह्न (?) के स्थान पर रखा जा सकता है।

9, 14, 34, 114, ?, 1714

- Ans ✗ 1. 524
✗ 2. 914
✗ 3. 654
✓ 4. 434

Question ID : 65497833691

Status : Answered

Chosen Option : 4

Q.25 L is the mother of M. L has only two children. N is the sister of M. N is the daughter of K. Z is the grandson of K. O is the mother of Z. How is O related to N?

- Ans
- 1. Sister
 - 2. Mother
 - 3. Wife
 - 4. Sister-in-law

Question ID : 65497833688
Status : Answered
Chosen Option : 4

Section : Part B General Knowledge and General Awareness

Q.1 The Right to Information Act is a good example of a law and it has more chances of working because:

- Ans
- 1. it eases penalties on frauds
 - 2. it acts as an enemy of democracy
 - 3. it supplements laws that encourage corruption
 - 4. it empowers people to find out what is happening in the government

Question ID : 65497833714
Status : Answered
Chosen Option : 4

Q.2 In which of the following states is Saryu river located?

- Ans
- 1. West Bengal
 - 2. Himachal Pradesh
 - 3. Uttarakhand
 - 4. Chhattisgarh

Question ID : 65497833704
Status : Answered
Chosen Option : 3

Q.3 Different crops grown in alternate rows is an example of:

- Ans
- 1. intercropping
 - 2. contour cropping
 - 3. combined cropping
 - 4. mixed cropping

Question ID : 65497833711
Status : Answered
Chosen Option : 4

Q.4 What was the rank of India in the final medals tally of Commonwealth Games 2018?

- Ans
- 1. Third
 - 2. Fourth
 - 3. Fifth
 - 4. Second

Question ID : 65497833715
Status : Not Answered
Chosen Option : --

Q.5 Ballabgarh became an important trading centre under the leadership of the Jat ruler

- Ans
- 1. Raja Ram
 - 2. Suraj Mal
 - 3. Randhir Singh
 - 4. Badan Singh

Question ID : **65497833713**
Status : **Not Answered**
Chosen Option : --

Q.6 Which of the following is NOT an abiotic component of the eco system?

- Ans
- 1. Temperature
 - 2. Living organisms
 - 3. Minerals
 - 4. Wind

Question ID : **65497833717**
Status : **Answered**
Chosen Option : **2**

Q.7 In which of the following countries was paper invented approximately 1900 years ago?

- Ans
- 1. Japan
 - 2. China
 - 3. Nepal
 - 4. India

Question ID : **65497833718**
Status : **Answered**
Chosen Option : **2**

Q.8 In which of the following places is the Vulture Conservation and Breeding Centre located?

- Ans
- 1. Pushkar
 - 2. Pinjore
 - 3. Rampur
 - 4. Agra

Question ID : **65497833701**
Status : **Answered**
Chosen Option : **3**

Q.9 Where is the active volcano found in India?

- Ans
- 1. Lakshadweep
 - 2. Andaman and Nicobar
 - 3. Goa
 - 4. Puducherry

Question ID : **65497833708**
Status : **Answered**
Chosen Option : **2**

Q.10 Which of the following is non-justiciable in nature in Indian Constitution?

- Ans
- 1. Equality of law and equal protection of law
 - 2. Protection with respect to conviction of offences
 - 3. Equal justice and free legal aid
 - 4. Freedom to manage religious affairs

Question ID : 65497833705
Status : Answered
Chosen Option : 3

Q.11 In which state was the special awareness campaign for women 'Mission Shakti' launched in October 2020?

- Ans
- 1. Bihar
 - 2. Madhya Pradesh
 - 3. Uttar Pradesh
 - 4. Punjab

Question ID : 65497833706
Status : Answered
Chosen Option : 3

Q.12 Who was the Governor General of British India when the annexation of Punjab was carried out by the Britishers?

- Ans
- 1. Lord Canning
 - 2. Lord Dalhousie
 - 3. Lord Harding
 - 4. Lord Ellenborough

Question ID : 65497833722
Status : Answered
Chosen Option : 2

Q.13 The Kelkar Committee 2015 is related to the _____.

- Ans
- 1. calculation of GDP
 - 2. fixation of poverty line
 - 3. merger of banks
 - 4. PPP model of infrastructure development

Question ID : 65497833699
Status : Answered
Chosen Option : 4

Q.14 According to the Public Affairs Index 2020, which among the following has been adjudged the best governed union territory in the category of UTs?

- Ans
- 1. Puducherry
 - 2. Chandigarh
 - 3. Ladakh
 - 4. Jammu and Kashmir

Question ID : 65497833716
Status : Answered
Chosen Option : 2

Q.15 Who among the following was adjudged as the 'Most Valuable Player of the Tournament' at the Indian Premier League 2020?

- Ans
- 1. Jasprit Bumrah
 - 2. Kagiso Rabada
 - 3. KL Rahul
 - 4. Jofra Archer

Question ID : **65497833703**
Status : **Answered**
Chosen Option : **2**

Q.16 In which year did the first Bengali woman writer Ashapoorna Devi win the Jnanpith Award?

- Ans
- 1. 1974
 - 2. 1976
 - 3. 1975
 - 4. 1973

Question ID : **65497833709**
Status : **Answered**
Chosen Option : **2**

Q.17 Which private bank launched a remote payment service named 'SMS Pay' for merchants on 26 November 2020?

- Ans
- 1. Axis Bank
 - 2. ICICI Bank
 - 3. Yes Bank
 - 4. HDFC Bank

Question ID : **65497833721**
Status : **Answered**
Chosen Option : **2**

Q.18 To which nation does swimmer Gaurika Singh, who was the youngest athlete in Rio Olympics 2016, belong to?

- Ans
- 1. Pakistan
 - 2. Nepal
 - 3. Bangladesh
 - 4. India

Question ID : **65497833710**
Status : **Answered**
Chosen Option : **4**

Q.19 Which of the following countries is the second largest cotton producer in the world as of October 2020?

- Ans
- 1. T bet
 - 2. Bangladesh
 - 3. India
 - 4. China

Question ID : **65497833719**
Status : **Answered**
Chosen Option : **4**

Q.20 Who among the following was the recipient of the 29th Vyas Samman?

- Ans 1. Leeladhar Jagoori
 2. Nasera Sharma
 3. Surendra Verma
 4. Mamta Kalia

Question ID : 65497833702
Status : Answered
Chosen Option : 1

Q.21 Salla dance form is performed in the state of _____.

- Ans 1. Jharkhand
 2. Uttar Pradesh
 3. Chhattisgarh
 4. Uttarakhand

Question ID : 65497833707
Status : Answered
Chosen Option : 1

Q.22 _____ is secreted by the pineal gland.

- Ans 1. Melatonin
 2. Progesterone
 3. Epinephrine
 4. Insulin

Question ID : 65497833700
Status : Answered
Chosen Option : 1

Q.23 Which of the following temples is located in Sri Lanka?

- Ans 1. Munneswaram
 2. Preah Vihear
 3. Katas Raj
 4. Pashupatinath

Question ID : 65497833698
Status : Not Answered
Chosen Option : --

Q.24 Muhammad Tughluq used 'token' currency to pay his soldiers, which was made out of:

- Ans 1. silver
 2. precious gold
 3. bronze
 4. cheap metals

Question ID : 65497833712
Status : Answered
Chosen Option : 2

Q.25 Reserve Bank of India put which bank under moratorium in November 2020?

- Ans** 1. State Bank of India
 2. Lakshmi Vilas Bank
 3. Bank of India
 4. Bank of Baroda

Question ID : 65497833720
Status : Answered
Chosen Option : 2

Section : Part C Elementary Mathematics

Q.1 Two positive numbers are in the ratio of 7 : 4. If the difference between their squares is 297, then the sum of the two numbers is:

- Ans** 1. 35
 2. 33
 3. 32
 4. 42

Question ID : 65497833727
Status : Answered
Chosen Option : 2

Q.2 A fruit seller had some apples. He sold 40% apples and still had 540 apples. The number of apples he had originally was:

- Ans** 1. 600
 2. 800
 3. 740
 4. 900

Question ID : 65497833733
Status : Answered
Chosen Option : 4

Q.3 Excluding stoppages, the speed of a bus is 60 km/h and including stoppages, it is 42 km/h. For how many minutes does the bus stop per hour?

- Ans** 1. 12
 2. 18
 3. 9
 4. 10

Question ID : 65497833735
Status : Answered
Chosen Option : 2

Q.4 In a sale, perfumes are available at a discount of 25% on the selling price. If a perfume costs ₹6,873 in the sale, what is the original selling price of the perfume?

- Ans**
- 1. ₹9,146
 - 2. ₹9,066
 - 3. ₹9,064
 - 4. ₹9,164

Question ID : 65497833732
Status : Not Answered
Chosen Option : --

Q.5 What is the compound interest (in ₹, nearest to a ₹) on a sum of ₹8,000 for $2\frac{1}{8}$ years at the rate of 16% p.a., interest compounded yearly?

- Ans**
- 1. 2,840
 - 2. 2,790
 - 3. 2,765
 - 4. 2,980

Question ID : 65497833745
Status : Not Answered
Chosen Option : --

Q.6 The monthly salaries of an officer and a clerk are in the ratio 11 : 4. If the monthly salary of the officer increases by ₹7,000 and that of the clerk by ₹3,000, then the ratio becomes 19 : 7. What was the initial salary (in ₹) of the officer?

- Ans**
- 1. 88,000
 - 2. 1,52,000
 - 3. 56,000
 - 4. 32,000

Question ID : 65497833725
Status : Answered
Chosen Option : 1

Q.7 One year ago, the ratio of the ages of A and B was 4 : 3. The ratio of their ages, after 7 years from now, will be 9 : 7. What is the present age (in years) of B?

- Ans**
- 1. 49
 - 2. 52
 - 3. 51
 - 4. 48

Question ID : 65497833744
Status : Answered
Chosen Option : 4

Q.8 The HCF of 3073, 1756 and 4829 is x . The product of the digits of x is:

- Ans
- 1. 96
 - 2. 72
 - 3. 81
 - 4. 108

Question ID : 65497833742
Status : Not Answered
Chosen Option : --

Q.9 Find the compound interest, if ₹3,000 was invested for 3 years at 20% p.a., interest compounded half yearly (nearest to a rupee).

- Ans
- 1. ₹2,010
 - 2. ₹2,301
 - 3. ₹2,110
 - 4. ₹2,315

Question ID : 65497833730
Status : Not Answered
Chosen Option : --

Q.10 Aman spends 74% of his income. If his expenditure increases by 30% and savings increase by 25%, then by what percentage will his income increase?

- Ans
- 1. 28.7%
 - 2. 26.8%
 - 3. 27.8%
 - 4. 27.2%

Question ID : 65497833743
Status : Answered
Chosen Option : 1

Q.11 The area (in m^2) of a triangular field, whose sides are 85 m, 85 m and 154 m, is:

- Ans
- 1. 2768
 - 2. 2872
 - 3. 2772
 - 4. 2868

Question ID : 65497833746
Status : Not Answered
Chosen Option : --

Q.12 15 boys can complete a work in 10 days and 12 girls can complete the same work in 15 days. If all 15 boys and 12 girls work together, in how many days, will the work get completed?

- Ans
- 1. 6
 - 2. 8
 - 3. 4
 - 4. 5

Question ID : 65497833739
Status : Answered
Chosen Option : 1

Q.13 By selling a guitar for ₹846, Rakhi loses 6%. For how much should Rima sell it to gain 8%?

- Ans
- 1. ₹912
 - 2. ₹992
 - 3. ₹972
 - 4. ₹922

Question ID : 65497833729
Status : Answered
Chosen Option : 3

Q.14 If the volume of a cube is $192\sqrt{3}$ cubic cm, then the length of its diagonal is:

- Ans
- 1. 16 cm
 - 2. 14 cm
 - 3. 13 cm
 - 4. 12 cm

Question ID : 65497833728
Status : Answered
Chosen Option : 4

Q.15 $\left(\frac{1}{4} \times \frac{3}{4} \div 1\frac{1}{4} \text{ of } \frac{2}{5}\right) \div \left(\frac{3}{4} \div 1\frac{2}{3} \text{ of } \frac{4}{5}\right) - \left(\frac{1}{2} - \frac{1}{2} \times \frac{1}{4}\right)$ का मान कितना होगा?

- Ans
- 1. $\frac{7}{24}$
 - 2. $\frac{2}{3}$
 - 3. $\frac{5}{12}$
 - 4. $\frac{11}{12}$

Question ID : 65497833740
Status : Answered
Chosen Option : 1

Q.16 The average of six numbers A, B, C, D, E and F is 58. If the first number A is two-fifth of the sum of B and C, and is also equal to three-fourth of the sum of D, E and F, then what is the value of the sum of B and C?

- Ans**
- 1. 180
 - 2. 360
 - 3. 116
 - 4. 240

Question ID : **65497833724**
Status : **Not Answered**
Chosen Option : --

Q.17 Which is the greatest number of seven digits, which when divided by 10, 15, 20, 24 and 30, leaves the remainders 6, 11, 16, 20 and 26, respectively?

- Ans**
- 1. 9999960
 - 2. 9999956
 - 3. 9999980
 - 4. 9999976

Question ID : **65497833723**
Status : **Answered**
Chosen Option : **2**

Q.18 A can complete a work in 10 days and B can complete it in 15 days. If they work on it together for 5 days, then the fraction of the work left will be:

- Ans**
- 1. $\frac{1}{6}$
 - 2. $\frac{1}{2}$
 - 3. $\frac{1}{3}$
 - 4. $\frac{1}{8}$

Question ID : **65497833734**
Status : **Answered**
Chosen Option : **1**

Q.19 One-third of the goods are sold at 15% profit, 25% of the goods are sold at 20% profit, and the rest of the goods are sold at 10% loss. If a profit of ₹350 is earned in the entire transaction, then the original value of the goods (in ₹) is:

- Ans**
- 1. 5,400
 - 2. 7,200
 - 3. 9,000
 - 4. 6,000

Question ID : **65497833747**
Status : **Not Answered**
Chosen Option : --

Q.20 $12 - [3 + \{4 \text{ of } 2 \div 8 - (8 - 6 \div 3)\}]$ का मान ज्ञात कीजिए।

- Ans
- 1. 20
 - 2. 12
 - 3. 14
 - 4. 10

Question ID : 65497833737
Status : Answered
Chosen Option : 3

Q.21 A man incurred 8% loss by selling a TV for ₹18,400. At what price should the TV be sold to earn 5% profit?

- Ans
- 1. ₹ 22,500
 - 2. ₹ 24,000
 - 3. ₹ 21,725
 - 4. ₹ 21,000

Question ID : 65497833738
Status : Answered
Chosen Option : 4

Q.22 The distance between two stations A and B is 700 km. A train covers the journey from A to B at a speed of 80 km/h and returns back to A with a uniform speed of 65 km/h. The average speed of train during the whole journey, is closest to:

- Ans
- 1. 74 km/h
 - 2. 71.72 km/h
 - 3. 72.7 km/h
 - 4. 70.73 km/h

Question ID : 65497833731
Status : Answered
Chosen Option : 2

Q.23 A single discount equivalent to three successive discounts i.e. 7%, 12% and 5%, is:

- Ans
- 1. 23%
 - 2. 27.3%
 - 3. 22.252%
 - 4. 22%

Question ID : 65497833736
Status : Answered
Chosen Option : 1

Q.24 A certain sum amounts to ₹12,740 in 4 years and to ₹15,925 in $7\frac{1}{2}$ years at the same rate percentage per annum at simple interest. The sum (in ₹) and the rate percentage per annum, respectively, are:

- Ans**
- 1. ₹7,800; 10%
 - 2. ₹9,100; 10%
 - 3. ₹7,800; 7.5%
 - 4. ₹9,100; 7.5%

Question ID : **65497833726**
Status : **Not Answered**
Chosen Option : --

Q.25 A 253 m long train running at a speed of 60 km/h takes 42 seconds to cross a bridge. The length (in m) of the bridge is:

- Ans**
- 1. 447
 - 2. 435
 - 3. 443
 - 4. 427

Question ID : **65497833741**
Status : **Answered**
Chosen Option : 1

Section : **Part D English**

Q.1 Select the most appropriate synonym of the given word.

Enjoyable

- Ans**
- 1. Bright
 - 2. Cloudy
 - 3. Delightful
 - 4. Beautiful

Question ID : **65497833754**
Status : **Not Answered**
Chosen Option : --

Q.2 Select the most appropriate synonym of the given word.

DEFER

- Ans**
- 1. Conflict
 - 2. Postpone
 - 3. Balance
 - 4. Match

Question ID : **65497833765**
Status : **Not Answered**
Chosen Option : --

Q.3 Select the option that can be used as a one-word substitute for the given group of words.

Certain to happen

- Ans 1. Necessary
 2. Predicted
 3. Inevitable
 4. Avoidable

Question ID : 65497833761
Status : Not Answered
Chosen Option : --

Q.4 Select the most appropriate ANTONYM of the given word.

Reign

- Ans 1. Manage
 2. Yield
 3. Govern
 4. Influence

Question ID : 65497833755
Status : Not Answered
Chosen Option : --

Q.5 Select the most appropriate option that can substitute the underlined segment in the given sentence. If there is no need to substitute it, select 'No substitution required'.

Don't disturb me while I talk to someone on the phone.

- Ans 1. talked
 2. am ta king
 3. was talking
 4. No substitution required

Question ID : 65497833748
Status : Not Answered
Chosen Option : --

Q.6 Select the most appropriate option to fill in the blank.

This antique sculpture is indeed _____.

- Ans 1. endless
 2. priceless
 3. helpless
 4. harmless

Question ID : 65497833767
Status : Not Answered
Chosen Option : --

Q.7 Select the option that can be used as a one-word substitute for the given group of words.

Eskimo's house that is made of ice blocks

- Ans 1. Igloo
 2. Burrow
 3. Den
 4. Cave

Question ID : **65497833749**
Status : **Not Answered**
Chosen Option : --

Q.8 The following sentence has been split into four segments. Identify the segment that contains a grammatical error.

Who do you think / who stole / the painting / from the museum?

- Ans 1. Who do you think
 2. the painting
 3. from the museum
 4. who stole

Question ID : **65497833759**
Status : **Not Answered**
Chosen Option : --

Q.9 Select the option that can be used as a one-word substitute for the given group of words.

Unable to act

- Ans 1. Inert
 2. Lazy
 3. Idle
 4. Lax

Question ID : **65497833766**
Status : **Not Answered**
Chosen Option : --

Q.10 Select the most appropriate meaning of the given idiom.

Big bucks

- Ans 1. A lot of money
 2. A big function
 3. A big bucket
 4. A big loss

Question ID : **65497833756**
Status : **Not Answered**
Chosen Option : --

Q.11 Select the most appropriate option to fill in the blank.

He ran towards his mother _____ and hugged her.

- Ans 1. gaily
 2. spitefully
 3. partially
 4. eventually

Question ID : 65497833751
Status : Not Answered
Chosen Option : --

Q.12 Select the INCORRECTLY spelt word.

- Ans 1. Miscreant
 2. Misalliance
 3. Misrepresent
 4. Miscelleneous

Question ID : 65497833762
Status : Not Answered
Chosen Option : --

Q.13 Select the correctly spelt word.

- Ans 1. Bureaucracy
 2. Scavage
 3. Warriar
 4. Inheritance

Question ID : 65497833750
Status : Not Answered
Chosen Option : --

Q.14 The following sentence has been divided into parts. One of them may contain an error.
Select the part that contains the error from the given options. If you don't find any error, mark 'No error' as your answer.

Reva is / one of Gita's best friend / in the class.

- Ans 1. one of Gita's best friend
 2. No error
 3. in the class
 4. Reva is

Question ID : 65497833764
Status : Not Answered
Chosen Option : --

Q.15 Select the most appropriate option that can substitute the underlined segment in the given sentence. If there is no need to substitute it, select 'No substitution required'.

I thanked my teacher for explaining me the lesson.

- Ans 1. explaining the lesson to me
 2. her explaining me the lesson
 3. explain me the lessons
 4. No substitution required

Question ID : 65497833758
Status : Not Answered
Chosen Option : --

Q.16 Select the most appropriate option that can substitute the underlined segment in the given sentence. If there is no need to substitute it, select 'No substitution required'.

The laptop that I bought last week works very good.

- Ans 1. very well
 2. very nice
 3. too good
 4. No substitution required

Question ID : 65497833757
Status : Not Answered
Chosen Option : --

Q.17 Select the most appropriate ANTONYM of the given word.

Crisp

- Ans 1. Hard
 2. Fresh
 3. Rotten
 4. Tender

Question ID : 65497833760
Status : Not Answered
Chosen Option : --

Q.18 Select the most appropriate meaning of the given idiom.

To break loose

- Ans 1. To escape
 2. To untie
 3. To set free
 4. To let go

Question ID : 65497833763
Status : Not Answered
Chosen Option : --

Q.19 The following sentence has been split into four segments. Identify the segment that contains a grammatical error.

The mountain / seems to steep / for us / to climb.

- Ans
- 1. The mountain
 - 2. to climb
 - 3. for us
 - 4. seems to steep

Question ID : 65497833753
Status : Not Answered
Chosen Option : --

Q.20 Select the most appropriate option to fill in the blank.

Visitors come from all over the world to _____ the Shalimar Gardens.

- Ans
- 1. perceive
 - 2. observe
 - 3. see
 - 4. look

Question ID : 65497833752
Status : Not Answered
Chosen Option : --

Comprehension:

In the following passage, some words have been deleted. Read the passage carefully and select the most appropriate option to fill in each blank.

Mahatma Gandhi was born (1)_____ 2 October 1869 to Karamchand and Putlibai (2)_____ Porbandar. After completing his studies in England, he (3)_____ to South Africa. When he suffered (4)_____, he started the Civil Disobedience movement (5)_____ civil rights of the Indian community.

SubQuestion No : 21

Q.21 Select the most appropriate option to fill in blank no. 1.

- Ans
- 1. from
 - 2. of
 - 3. on
 - 4. in

Question ID : 65497833769
Status : Not Answered
Chosen Option : --

Comprehension:

In the following passage, some words have been deleted. Read the passage carefully and select the most appropriate option to fill in each blank.

Mahatma Gandhi was born (1)_____ 2 October 1869 to Karamchand and Putlibai (2)_____ Porbandar. After completing his studies in England, he (3)_____ to South Africa. When he suffered (4)_____, he started the Civil Disobedience movement (5)_____ civil rights of the Indian community.

SubQuestion No : 22**Q.22 Select the most appropriate option to fill in blank no. 2.**

- Ans 1. at
 2. through
 3. above
 4. below

Question ID : **65497833770**
Status : **Not Answered**
Chosen Option : --

Comprehension:

In the following passage, some words have been deleted. Read the passage carefully and select the most appropriate option to fill in each blank.

Mahatma Gandhi was born (1)_____ 2 October 1869 to Karamchand and Putlibai (2)_____ Porbandar. After completing his studies in England, he (3)_____ to South Africa. When he suffered (4)_____, he started the Civil Disobedience movement (5)_____ civil rights of the Indian community.

SubQuestion No : 23**Q.23 Select the most appropriate option to fill in blank no. 3.**

- Ans 1. gone
 2. went
 3. going
 4. will go

Question ID : **65497833771**
Status : **Not Answered**
Chosen Option : --

Comprehension:

In the following passage, some words have been deleted. Read the passage carefully and select the most appropriate option to fill in each blank.

Mahatma Gandhi was born (1)_____ 2 October 1869 to Karamchand and Putlibai (2)_____ Porbandar. After completing his studies in England, he (3)_____ to South Africa. When he suffered (4)_____, he started the Civil Disobedience movement (5)_____ civil rights of the Indian community.

SubQuestion No : 24**Q.24 Select the most appropriate option to fill in blank no. 4.**

- Ans 1. delegation
 2. discrimination
 3. deterioration
 4. distinction

Question ID : **65497833772**
Status : **Not Answered**
Chosen Option : --

Comprehension:

In the following passage, some words have been deleted. Read the passage carefully and select the most appropriate option to fill in each blank.

Mahatma Gandhi was born (1)_____ 2 October 1869 to Karamchand and Putlibai (2)_____ Porbandar. After completing his studies in England, he (3)_____ to South Africa. When he suffered (4)_____, he started the Civil Disobedience movement (5)_____ civil rights of the Indian community.

SubQuestion No : 25

Q.25 Select the most appropriate option to fill in blank no. 5.

- Ans 1. to
 2. for
 3. after
 4. with

Question ID : 65497833773
Status : Not Answered
Chosen Option : --

Section : Part D Hindi

Q.1 _____ हमारी राजभाषा है। उचित शब्द लिखिए।

- Ans 1. संस्कृत
 2. हिन्दी
 3. गुजराती
 4. मराठी

Question ID : 65497833790
Status : Answered
Chosen Option : 2

Q.2 दिए गए वाक्य में रेखांकित खंड को प्रतिस्थापित करने के लिए सबसे उपयुक्त विकल्प का चयन करें। यदि इसे प्रतिस्थापित करने की आवश्यकता नहीं है, तो विकल्प 'किसी बदलाव की आवश्यकता नहीं है' का चयन करें।

मैं आम खाया गया।

- Ans 1. मेरे को
 2. किसी बदलाव की आवश्यकता नहीं है।
 3. मुझे
 4. मुझसे

Question ID : 65497833783
Status : Answered
Chosen Option : 4

Q.3 रिक्त स्थान भरने के लिए सबसे उपयुक्त शब्द का चयन करें।

मेरे ऊपर परिवार के पालन-पोषण का _____ है।

- Ans 1. निर्वहन
 2. आभार
 3. आधार
 4. दायित्व

Question ID : 65497833776
Status : Answered
Chosen Option : 4

Q.4 दिए गए वाक्य में रेखांकित खंड को प्रतिस्थापित करने के लिए सबसे उपयुक्त विकल्प का चयन करें। यदि इसे प्रतिस्थापित करने की आवश्यकता नहीं है, तो विकल्प 'किसी बदलाव की आवश्यकता नहीं है' का चयन करें।

अधिक जनसंख्या अनेक समस्याओं को जन्म देता है।

- Ans
- 1. किसी बदलाव की आवश्यकता नहीं है।
 - 2. अनेक समस्याओं को जन्म देती है।
 - 3. अनेक समस्या को जन्म देती है।
 - 4. अनेक समस्याओं को जन्म देती हैं।

Question ID : 65497833777
Status : Answered
Chosen Option : 2

Q.5 'छठी का दूध याद आना' मुहाबरे का सही अर्थ है-

- Ans
- 1. संकट के समय पिछले सुख की याद आना
 - 2. अतीत पर गौरवान्वित होना
 - 3. संकट के समय पिछले दुख की याद आना
 - 4. अत्यंत प्रसन्न होना

Question ID : 65497833789
Status : Answered
Chosen Option : 3

Q.6 दिये गये वाक्य के किस भाग में त्रुटि है?

केवल आप ही यह काम निपुणता से कर सकते हैं।

- Ans
- 1. निपुणता से
 - 2. केवल आप ही
 - 3. यह काम
 - 4. कर सकते हैं।

Question ID : 65497833784
Status : Answered
Chosen Option : 1

Q.7 दिए गए शब्द के समानार्थी शब्द का चयन करें।

मोल

- Ans
- 1. मुँ
 - 2. दाम
 - 3. मूल
 - 4. मलीन

Question ID : 65497833779
Status : Answered
Chosen Option : 2

Q.8 सही वर्तनी वाले शब्द का चयन करें।

- Ans 1. परिनाम
 2. परिणाम
 3. परीणाम
 4. परीनाम

Question ID : 65497833774
Status : Answered
Chosen Option : 3

Q.9 सही वर्तनी वाले शब्द का चयन करें।

- Ans 1. धराशायी
 2. धाराशाई
 3. धाराशायी
 4. धराशयी

Question ID : 65497833775
Status : Answered
Chosen Option : 1

Q.10 'उन्नति' का विलोम शब्द होगा-

- Ans 1. दुर्गति
 2. अपनति
 3. सम्मति
 4. अवनति

Question ID : 65497833785
Status : Answered
Chosen Option : 1

Q.11 दिये गये वाक्यांश के लिए एक शब्द दीजिये।

अतिथि की सेवा करने वाला

- Ans 1. आतिथ्य
 2. आतिथेय
 3. आशुतोष
 4. सेवक

Question ID : 65497833780
Status : Answered
Chosen Option : 4

Q.12 'किसी और स्थान पर' वाक्यांश के लिए एक शब्द होगा-

- Ans 1. अन्यत्र
 2. तत्र
 3. यत्र
 4. सर्वत्र

Question ID : 65497833786
Status : Answered
Chosen Option : 2

Q.13 निम्नलिखित प्रश्न में, दिए गए चार विकल्पों में से, उस विकल्प का चयन करें जो मुहावरे का अर्थ व्यक्त करता है।

हाथ मलना

- Ans 1. वीरता दिखाना
 2. व्यायाम करना
 3. पछताना
 4. संकल्प करना

Question ID : 65497833782
Status : Answered
Chosen Option : 4

Q.14 'तिमिर' का विलोम शब्द होगा-

- Ans 1. आकाश
 2. प्रकाश
 3. अंधकार
 4. रात्रि

Question ID : 65497833788
Status : Answered
Chosen Option : 2

Q.15 मनुष्य जीवन _____ से सफल होता है। रिक्त स्थान की पूर्ति कीजिए।

- Ans 1. क्रोध
 2. आलसी जीवन से
 3. लोभ-लालच
 4. परिश्रम

Question ID : 65497833791
Status : Answered
Chosen Option : 4

Q.16 'व्यथा' का पर्यायवाची है-

- Ans 1. दुःख
 2. वियोग
 3. चिंता
 4. सुख

Question ID : 65497833793
Status : Answered
Chosen Option : 3

Q.17 दिये गये वाक्य के किस भाग में त्रुटि है?

मालिक मजदूरों का शोसण करते हैं।

- Ans 1. मालिक
 2. मजदूरों का
 3. शोसण
 4. करते हैं।

Question ID : 65497833792
Status : Answered
Chosen Option : 3

Q.18 दिए गए वाक्य का वह भाग ज्ञात करें जिसमें कोई त्रुटि है। यदि कोई त्रुटि नहीं है, तो 'कोई त्रुटि नहीं है' चुने।

कई दिनों की बदली के पीछे आज धूप निकली है।

- Ans 1. बदली के पीछे
 2. धूप निकली है।
 3. कई दिनों क
 4. कोई त्रुटि नहीं है।

Question ID : 65497833778
Status : Answered
Chosen Option : 1

Q.19 'धरती और आकाश के बीच का स्थान' वाक्यांश के लिए एक शब्द होगा-

- Ans 1. अंतरीप
 2. द्वीप
 3. गिरि
 4. अंतरिक्ष

Question ID : 65497833787
Status : Answered
Chosen Option : 3

Q.20 दिए गए वाक्य में रेखांकित खंड को प्रतिस्थापित करने के लिए सबसे उपयुक्त विकल्प का चयन करें। यदि इसे प्रतिस्थापित करने की आवश्यकता नहीं है, तो विकल्प 'किसी बदलाव की आवश्यकता नहीं है' का चयन करें।

परिवार नियोजन को कार्यक्रमों द्वारा जनसंख्या वृद्धि को रोका जाना चाहिए।

- Ans 1. परिवार नियोजन के कार्यक्रमों द्वारा
 2. किसी बदलाव की आवश्यकता नहीं है।
 3. परिवार नियोजन में कार्यक्रमों द्वारा
 4. परिवार नियोजन से कार्यक्रमों के द्वारा

Question ID : 65497833781
Status : Answered
Chosen Option : 1

Comprehension:

आचरण की सभ्यता का देश ही (1) _____ है। उसमें न शारीरिक झगड़े हैं, न मानसिक, न आध्यात्मिक। न उसमें विद्रोह है, न जंग ही का (2) _____ है और न वहाँ कोई ऊँचा है, न (3) _____। न कोई वहाँ धनवान् है और न कोई वहाँ (4) _____। वहाँ प्रकृति का नाम नहीं, वहाँ तो प्रेम और एकता का (5) _____ राज्य रहता है।

निम्न प्रश्नों के उत्तर उपरोक्त गद्यांश के आधार पर दीजिए।

SubQuestion No : 21

Q.21 गद्यांश के रिक्त स्थान (1) के लिए सर्वाधिक उपयुक्त शब्द होगा-

- Ans 1. मतवाला
 2. निराला
 3. भयंकर
 4. रंगीला

Question ID : 65497833795
Status : Answered
Chosen Option : 2

Comprehension:

आचरण की सभ्यता का देश ही (1) _____ है। उसमें न शारीरिक झगड़े हैं, न मानसिक, न आध्यात्मिक। न उसमें विद्रोह है, न जंग ही का (2) _____ है और न वहाँ कोई ऊँचा है, न (3) _____। न कोई वहाँ धनवान् है और न कोई वहाँ (4) _____। वहाँ प्रकृति का नाम नहीं, वहाँ तो प्रेम और एकता का (5) _____ राज्य रहता है।

निम्न प्रश्नों के उत्तर उपरोक्त गद्यांश के आधार पर दीजिए।

SubQuestion No : 22

Q.22 गद्यांश के रिक्त स्थान (2) के लिए सर्वाधिक उपयुक्त शब्द होगा-

- Ans 1. संकेत
 2. नामोनिशान
 3. चीत्कार
 4. लक्षण

Question ID : 65497833796
Status : Answered
Chosen Option : 2

Comprehension:

आचरण की सभ्यता का देश ही (1) _____ है। उसमें न शारीरिक झगड़े हैं, न मानसिक, न आध्यात्मिक। न उसमें विद्रोह है, न जंग ही का (2) _____ है और न वहाँ कोई ऊँचा है, न (3) _____। न कोई वहाँ धनवान् है और न कोई वहाँ (4) _____। वहाँ प्रकृति का नाम नहीं, वहाँ तो प्रेम और एकता का (5) _____ राज्य रहता है।

निम्न प्रश्नों के उत्तर उपरोक्त गद्यांश के आधार पर दीजिए।

SubQuestion No : 23

Q.23 गद्यांश के रिक्त स्थान (3) के लिए सर्वाधिक उपयुक्त शब्द होगा-

- Ans 1. मूर्ख
 2. विद्वान
 3. नीचा
 4. समान

Question ID : 65497833797
Status : Answered
Chosen Option : 3

Comprehension:

आचरण की सभ्यता का देश ही (1) _____ है। उसमें न शारीरिक झगड़े हैं, न मानसिक, न आध्यात्मिक। न उसमें विद्रोह है, न जंग ही का (2) _____ है और न वहाँ कोई ऊँचा है, न (3) _____। न कोई वहाँ धनवान् है और न कोई वहाँ (4) _____। वहाँ प्रकृति का नाम नहीं, वहाँ तो प्रेम और एकता का (5) _____ राज्य रहता है।

निम्न प्रश्नों के उत्तर उपरोक्त गद्यांश के आधार पर दीजिए।

SubQuestion No : 24

Q.24 गद्यांश के रिक्त स्थान (4) के लिए सर्वाधिक उपयुक्त शब्द होगा-

- Ans 1. देवता
 2. निर्धन
 3. वीर
 4. बलवान

Question ID : 65497833798
Status : Answered
Chosen Option : 2

Comprehension:

आचरण की सभ्यता का देश ही (1) _____ है। उसमें न शारीरिक झगड़े हैं, न मानसिक, न आध्यात्मिक। न उसमें विद्रोह है; न जंग ही का (2) _____ है और न वहाँ कोई ऊँचा है, न (3) _____। न कोई वहाँ धनवान् है और ना कोई वहाँ (4) _____। वहाँ प्रकृति का नाम नहीं, वहाँ तो प्रेम और एकता का (5) _____ राज्य रहता है।

निम्न प्रश्नों के उत्तर उपरोक्त गद्यांश के आधार पर दीजिए।

SubQuestion No : 25

Q.25 गद्यांश के रिक्त स्थान (5) के लिए सर्वाधिक उपयुक्त शब्द होगा-

Ans 1. अखंड

2. सम्पूर्ण

3. खंडित

4. कृत्रिम

Question ID : 65497833799

Status : Answered

Chosen Option : 2

**SSC
GD**

Previous Year Paper
18 Nov 2021 Shift 2

Exam Date	18/11/2021
Exam Time :	12:30 PM - 2:00 PM
Subject	Constable GD 2021

Section : Part A General Intelligence and Reasoning

Q.1 Select the option that is related to the third number in the same way as the second number is related to the first number.

70 : 8 :: 87 : ?

- Ans
- 1. 8
 - 2. 9
 - 3. 6
 - 4. 7

Question ID : 65497830638
 Status : Answered
 Chosen Option : 2

Q.2 Select the correct option that indicates the arrangement of the given words in the order in which they appear in an English dictionary.

1. Hostile
2. Hostel
3. Hospital
4. House
5. Hopeless

- Ans
- 1. 5, 3, 1, 2, 4
 - 2. 3, 5, 2, 1, 4
 - 3. 5, 3, 2, 1, 4
 - 4. 4, 3, 2, 1, 5

Question ID : 65497830625
 Status : Answered
 Chosen Option : 1

Q.3 Eight friends, A, B, C, D, E, F, G and H, are sitting around a round table at equal distance between each other, facing the centre of the table. D is sitting between F and H. A is not sitting between B and G. C is sitting third to the right of A. E is sitting second to the left of D. Who is sitting opposite to A?

- Ans
- 1. E
 - 2. F
 - 3. H
 - 4. D

Question ID : 65497830637
 Status : Marked For Review
 Chosen Option : 3

Q.4 P, Q, R, S, T and U are sitting on a bench. Q is at the right end. R is sitting to the immediate right of S. U is sitting to the immediate left of T, and T is sitting to the immediate left of Q. P is sitting to the immediate left of S. Who is sitting at the left end?

- Ans
- 1. U
 - 2. T
 - 3. R
 - 4. P

Question ID : 65497830646
Status : Answered
Chosen Option : 4

Q.5 Select the number from among the given options that can replace the question mark (?) in the following series.

123, 98, 82, 73, 69, ?

- Ans
- 1. 49
 - 2. 68
 - 3. 52
 - 4. 57

Question ID : 65497830647
Status : Answered
Chosen Option : 2

Q.6 A number when added to 4 times to itself, gets equal to 10 times to its predecessor. Find the number.

- Ans
- 1. 2
 - 2. 10
 - 3. 8
 - 4. 5

Question ID : 65497830635
Status : Answered
Chosen Option : 1

Q.7 Select the combination of letters that when sequentially placed in the blanks of the given series will complete the series.

Z _ K F _ O K G Z _ K _ Z O _ I

- Ans
- 1. O Z O H K
 - 2. O Z K H K
 - 3. O Z O H Z
 - 4. K Z O H K

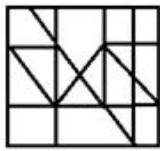
Question ID : 65497830626
Status : Answered
Chosen Option : 1

Q.8 Select the option in which the given figure is embedded (rotation is NOT allowed).

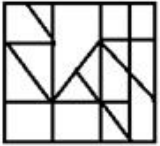


Ans

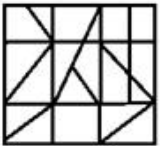
✓ 1.



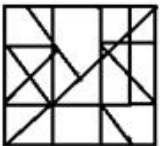
✗ 2.



✗ 3.



✗ 4.



Question ID : 65497830641

Status : Answered

Chosen Option : 1

Q.9 'Dictionary' is related to 'Meaning' in the same way as 'Encyclopaedia' is related to

_____.

Ans ✗ 1. Synonyms

✗ 2. Phrase

✗ 3. News

✓ 4. Knowledge

Question ID : 65497830644

Status : Answered

Chosen Option : 4

Q.10 Read the given statements and conclusions carefully. Assuming that the information given in the statements is true, even if it appears to be at variance with commonly known facts, decide which of the given conclusions logically follow(s) from the statements.

Statements:

All girls are actors.
All actors are singers.

Conclusions:

1. Some girls are not singers.
2. No actor is a girl.
3. All girls are singers.

- Ans** 1. Both conclusions 1 and 3 follow
 2. Only conclusion 3 follows
 3. Only conclusion 1 follows
 4. Only conclusion 2 follows

Question ID : 65497830633

Status : Answered

Chosen Option : 2

Q.11 Select the letter-cluster from among the given options that can replace the question mark (?) in the following series.

FPW, EQV, DRU, ?

- Ans** 1. COS
 2. CST
 3. TWX
 4. CSG

Question ID : 65497830642

Status : Answered

Chosen Option : 2

Q.12 In a certain code language, 'GREW' is coded as '209224'. How will 'TYPE' be coded in that language?

- Ans** 1. 721122
 2. 721162
 3. 202511
 4. 511237

Question ID : 65497830645

Status : Answered

Chosen Option : 1

Q.13 In a certain code language, 'Where are you' is written as 'me ki na', 'When you come' is written as 'bel na se', and 'Come back home' is written as 'se ne jo'. How will 'When' be written in that language?

- Ans** 1. ki
 2. se
 3. me
 4. bel

Question ID : 65497830632

Status : Answered

Chosen Option : 4

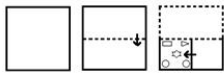
Q.14 Study the given pattern carefully and select the number that can replace the question mark (?) in it.

9 18 ?
 18 32 79
 27 58 46

- Ans 1. 22
 2. 21
 3. 26
 4. 25

Question ID : 65497830634
 Status : Answered
 Chosen Option : 4

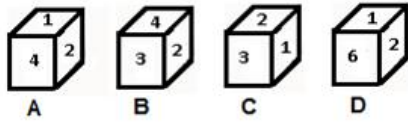
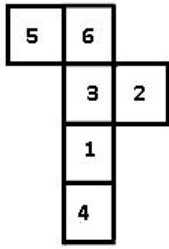
Q.15 The sequence of folding a piece of paper and the manner in which the folded paper has been cut is shown in the following figures. How would this paper look when unfolded?



- Ans 1.
- 2.
- 3.
- 4.

Question ID : 65497830636
 Status : Answered
 Chosen Option : 2

Q.16 Select the dice that can be formed by folding the given sheet along the lines.




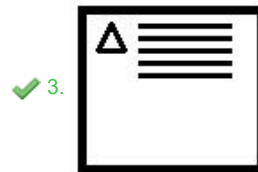

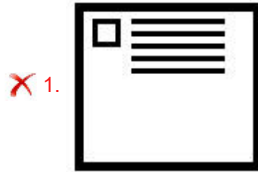
- Ans
- 1. Only A
 - 2. D and B
 - 3. A and C
 - 4. Only C

Question ID : 65497830640
Status : Answered
Chosen Option : 3

Q.17 Select the figure that will replace the question mark (?) in the following figure series.



Ans



Question ID : 65497830628
Status : Answered
Chosen Option : 3

Q.18 Select the option that is related to the third term in the same way as the second term is related to the first term.

CREAM : FPJYZ :: CHECK : ?

- Ans
- ✗ 1. FZJFV
 - ✓ 2. FFJAV
 - ✗ 3. FPJZV
 - ✗ 4. FFJFV

Question ID : 65497830629
Status : Answered
Chosen Option : 2

Q.19 In a certain code language, 'CHAINED' is written as 'EJYGPCF'. How will 'MEADOW' be written in that language?

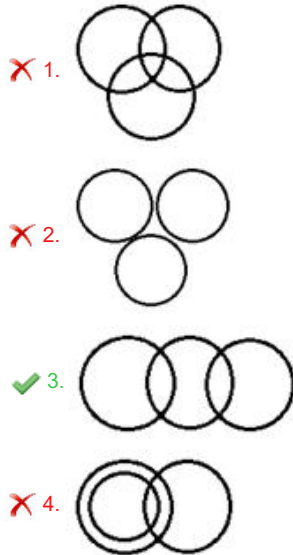
- Ans
- ✗ 1. PCYFMY
 - ✗ 2. OCYFNY
 - ✓ 3. OCYFMY
 - ✗ 4. PCYFQY

Question ID : 65497830630
Status : Answered
Chosen Option : 3

Q.20 Select the Venn diagram that best represents the relationship between the following classes.

Passengers, Flight, Train

Ans



Question ID : 65497830649
Status : Answered
Chosen Option : 3

Q.21 Select the number from among the given options that can replace the question mark (?) in the following series.

17, 18, 26, 53, 117, ?

- Ans 1. 302
 2. 242
 3. 336
 4. 232

Question ID : 65497830627
Status : Answered
Chosen Option : 2

Q.22 If 'A' denotes 'addition', 'B' denotes 'subtraction', 'C' denotes 'multiplication' and 'D' denotes 'division', then what will be the value of the following expression?

6 C (57 B 8) D 7 B 32 A 9

- Ans 1. 27
 2. 18
 3. 15
 4. 19

Question ID : 65497830639
Status : Answered
Chosen Option : 4

Q.23 Select the correct mirror image of the given combination when the mirror is placed at PQ as shown.

QZ9JFN |

- Ans
- 1. MFI1850
 - 2. MFI1850
 - 3. MFI1850
 - 4. MFI1850

Question ID : 65497830648
Status : Answered
Chosen Option : 2

Q.24 Four letter-clusters have been given, out of which three are alike in some manner and one is different. Select the letter-cluster that is different.

- Ans
- 1. ODS
 - 2. AHI
 - 3. GNU
 - 4. DOU

Question ID : 65497830643
Status : Answered
Chosen Option : 4

Q.25 Ajay and Charul are brother and sister. Manoj and Darshan are the sons of Kripal and Sona. Sona is the mother-in-law of Charul's mother Swapnil. Neha, Niti and Nakul are the daughters of Manoj and the only cousins of Ajay. How many children does Darshan have?

- Ans
- 1. 4
 - 2. 1
 - 3. 3
 - 4. 2

Question ID : 65497830631
Status : Marked For Review
Chosen Option : 4

Section : Part B General Knowledge and General Awareness

Q.1 How many Articles and Schedules, respectively, were there in the Constitution of India in 2019?

- Ans
- 1. 398 and 6
 - 2. 395 and 8
 - 3. 392 and 7
 - 4. 396 and 8

Question ID : 65497830669
Status : Answered
Chosen Option : 4

Q.2 Which of the following Indians made the country proud in Malaysia by being the fastest Indian to complete the Ironman Malaysia triathlon in record time?

- Ans
- 1. Hiren Patel
 - 2. Akshay Samel
 - 3. Arunaabh Shah
 - 4. Swaroop Singh Kuntal

Question ID : 65497830671
Status : Not Answered
Chosen Option : --

Q.3 Which process is used by the unicellular freshwater organisms and most plant cells to take in water?

- Ans
- 1. Morphogenesis
 - 2. Osmosis
 - 3. Hybridisation
 - 4. Tropism

Question ID : 65497830651
Status : Answered
Chosen Option : 2

Q.4 As per FIFA Regulations, a football (soccer) match consists of two 45 minutes halves with a _____ rest period in between.

- Ans
- 1. 20 minutes
 - 2. 15 minutes
 - 3. 10 minutes
 - 4. 30 minutes

Question ID : 65497830674
Status : Answered
Chosen Option : 3

Q.5 Which scientist among the following coined the term 'protoplasm' for the fluid substance of the cell?

- Ans
- 1. Leeuwenhoek
 - 2. Purkinje
 - 3. Virchow
 - 4. Schwann

Question ID : 65497830664
Status : Answered
Chosen Option : 2

Q.6 Who among the following wrote the book 'India Wins Freedom' giving an insider's view of India's freedom struggle?

- Ans
- 1. Sardar Vallabhbhai Patel
 - 2. Dr. BR Ambedkar
 - 3. Jawaharlal Nehru
 - 4. Maulana Abul Kalam Azad

Question ID : 65497830654
Status : Answered
Chosen Option : 4

Q.7 Who among the following was the first Indian Women Athlete to win a gold medal in any Asian Games?

- Ans
- 1. Durba Banarjee
 - 2. Karnam Malleswari
 - 3. Arti Saha
 - 4. Kamaljeet Sandhu

Question ID : 65497830650
Status : Answered
Chosen Option : 4

Q.8 Which of the following events occurred before the arrival of Simon Commission in India?

- Ans
- 1. The First Round Table Conference
 - 2. Gandhi-Irwin Pact
 - 3. Quit India Movement
 - 4. Kakori Conspiracy

Question ID : 65497830661
Status : Answered
Chosen Option : 3

Q.9 The aim of _____ is to promote the Panchayati Raj Institutions in the country.

- Ans
- 1. the Constitution (Sixtieth Amendment) Act, 1988
 - 2. the Constitution (Forty-third Amendment) Act, 1977
 - 3. the Constitution (Seventy-third Amendment) Act, 1992
 - 4. the Constitution (Thirty-Seventh Amendment) Act, 1975

Question ID : 65497830656
Status : Answered
Chosen Option : 3

Q.10 Who among the following won the Dada Saheb Phalke Award in 2020 for his documentary 'Chi Lupo'?

- Ans
- 1. Kasinathuni Viswanath
 - 2. Kezang D Thongdok
 - 3. B Nagi Reddy
 - 4. Akkineni Nageswara Rao

Question ID : 65497830668
Status : Answered
Chosen Option : 2

Q.11 Who among the following was the youngest umpire to enter the ICC Elite Panel in 2020?

- Ans
- 1. Aleem Dar
 - 2. Nitin Menon
 - 3. Sundaram Ravi
 - 4. Nigel Llong

Question ID : 65497830653
Status : Answered
Chosen Option : 3

Q.12 In how many phases was the General Election to the Legislative Assembly of Bihar 2020 conducted by the Election Commission of India?

Ans 1. Three

2. Two

3. Four

4. Five

Question ID : 65497830657
Status : Answered
Chosen Option : 3

Q.13 Which of the following is a conventional source of energy?

Ans 1. Biogas

2. Wind energy

3. Solar energy

4. Firewood

Question ID : 65497830667
Status : Answered
Chosen Option : 3

Q.14 Which of the following is a statistical tool that measures a country's overall achievement in terms of health, education and income?

Ans 1. Human development index

2. Per capita income

3. Life expectancy

4. Political stability

Question ID : 65497830659
Status : Answered
Chosen Option : 1

Q.15 Who among the following introduced the 'Doctrine of Lapse'?

Ans 1. Lord Ripon

2. Warren Hastings

3. Lord Canning

4. Lord Dalhousie

Question ID : 65497830655
Status : Answered
Chosen Option : 4

Q.16 Who among the following constructed the Jamat Khana Mosque in Delhi?

Ans 1. Quṭb al-Dīn Mubārak Shah

2. Jalal-ud-din Firuz Khilji

3. Ala-ud-din Khilji

4. Khizr Khan

Question ID : 65497830662
Status : Answered
Chosen Option : 3

Q.17 The property of metals to produce ringing sound on being struck with a hard object is known as _____.

- Ans
- 1. Malleability
 - 2. Ductility
 - 3. Opaque
 - 4. Sonorous

Question ID : 65497830663
Status : Answered
Chosen Option : 4

Q.18 What makes the soil fertile?

- Ans
- 1. Overabundance of acidic materials in the soil
 - 2. The right mix of minerals and inorganic matter
 - 3. The right mix of minerals and organic matter
 - 4. High levels of salt in the soil

Question ID : 65497830673
Status : Answered
Chosen Option : 3

Q.19 As of 2020, in which of the following cities is the headquarters of Axis Bank located?

- Ans
- 1. Ahmedabad
 - 2. Bengaluru
 - 3. Chennai
 - 4. Mumbai

Question ID : 65497830660
Status : Answered
Chosen Option : 4

Q.20 Which of the following sports personalities won the Rajiv Gandhi Khel Ratna Award 2020?

- Ans
- 1. Vishesh Bhriguvanshi
 - 2. Dharmendra Tiwary
 - 3. Mariyappan Thangavelu
 - 4. Vijay Bhalchandra Munishwar

Question ID : 65497830670
Status : Answered
Chosen Option : 3

Q.21 Devprayag is the place where the Bhagirathi joins _____.

- Ans
- 1. Ghaghara
 - 2. Meghna
 - 3. Gandak
 - 4. Alaknanda

Question ID : 65497830658
Status : Answered
Chosen Option : 4

Q.22 _____ is an asset that the borrower owns and uses as a guarantee to a lender, until the loan is repaid.

- Ans
- 1. Accessory
 - 2. Ancillary
 - 3. Bail
 - 4. Collateral

Question ID : 65497830672
Status : Answered
Chosen Option : 1

Q.23 What are the two languages in which the Kandahar Bilingual Rock Inscriptions were written?

- Ans
- 1. Arabic and Greek
 - 2. Persian and Aramaic
 - 3. Greek and Aramaic
 - 4. Greek and Prakrit

Question ID : 65497830666
Status : Answered
Chosen Option : 2

Q.24 Who among the following was the successor of Chandragupta I?

- Ans
- 1. Vikramaditya
 - 2. Samudragupta
 - 3. Chandragupta II
 - 4. Ghatotkacha

Question ID : 65497830652
Status : Answered
Chosen Option : 4

Q.25 Who authored the book 'Voices of Dissent' published in October 2020?

- Ans
- 1. Arjun Anand
 - 2. Arundhati Roy
 - 3. Sarbpreet Singh
 - 4. Romila Thapar

Question ID : 65497830665
Status : Not Attempted and Marked For Review
Chosen Option : --

Section : Part C Elementary Mathematics

Q.1 A can complete $\frac{2}{3}$ of a work in 10 days and B can complete $\frac{4}{5}$ of the same work in 8 days. They work together for 5 days. The remaining work is completed by C alone in 6 days. In how many days C alone can complete 75% of the same work?

- Ans
- 1. 27
 - 2. 36
 - 3. 18
 - 4. 30

Question ID : 65497830683
Status : Answered

Q.2 An electric heater was sold at a profit of 12%. If its cost had been 5% less and it had been sold for ₹180 less, the profit would have been 10%. What is the cost price of the electric heater?

- Ans**
- 1. ₹2,250
 - 2. ₹2,380
 - 3. ₹2,400
 - 4. ₹2,000

Question ID : 65497830675
Status : Answered
Chosen Option : 3

Q.3 The price of sugar rises by 33%. By what percent should a family reduce the consumption of sugar, so as NOT to increase the expenditure?

- Ans**
- 1. 30
 - 2. 24.8
 - 3. 29.8
 - 4. 33

Question ID : 65497830693
Status : Answered
Chosen Option : 2

Q.4 A cistern has a leak which would empty it in 6 hours. A tap is turned on which admits 10 litres of water per minute into the cistern. When it is full it now emptied in 10 hours. What is the capacity (in litres) of the cistern?

- Ans**
- 1. 8000
 - 2. 9000
 - 3. 8500
 - 4. 10000

Question ID : 65497830694
Status : Answered
Chosen Option : 2

Q.5 Two ropes, one 8 m long and the other 14 m long are to be cut into pieces of the same length. What will the maximum possible length of each piece be?

- Ans**
- 1. 1 m
 - 2. 4 m
 - 3. 2 m
 - 4. 6 m

Question ID : 65497830684
Status : Answered
Chosen Option : 4

Q.6 If the radius and the height of a circular cylinder are 10 cm and 15 cm, respectively, and the radius of a sphere is 5 cm, then what is the ratio of the curved surface area of the cylinder to that of the sphere?

- Ans**
- 1. 3 : 2
 - 2. 5 : 1
 - 3. 3 : 1
 - 4. 1 : 3

Question ID : 65497830680
Status : Answered
Chosen Option : 3

Q.7 The capacities of two hemispherical vessels are 2.7 litres and 12.5 litres. Find the ratio of the areas of the inner curved surfaces of the vessels.

- Ans**
- 1. 3 : 5
 - 2. 5 : 3
 - 3. 2 : 1
 - 4. 1 : 2

Question ID : 65497830699
Status : Answered
Chosen Option : 1

Q.8 The ratio of the number of girls and boys in a school is 8 : 7. If the percentage increase in the number of girls and boys is 10% and 20%, respectively, what will be the new ratio?

- Ans**
- 1. 14 : 19
 - 2. 22 : 21
 - 3. 20 : 23
 - 4. 13 : 11

Question ID : 65497830697
Status : Answered
Chosen Option : 2

Q.9 When 55 is subtracted from a number, it reduces to its 80%. Find four-fifth of the original number.

- Ans**
- 1. 240
 - 2. 220
 - 3. 210
 - 4. 180

Question ID : 65497830685
Status : Answered
Chosen Option : 2

Q.10 A shopkeeper bought 60 kg of rice at ₹42 per kg and mixed it with 120 kg rice at ₹52 per kg. At what rate (₹ per kg) should he sell the mixture to gain 20%?

- Ans**
- 1. ₹ 53.25
 - 2. ₹ 54.82
 - 3. ₹ 58.40
 - 4. ₹ 55.50

Question ID : 65497830696
Status : Answered

Q.11 An article was sold for ₹8800 which is $\frac{5}{7}$ of its cost price. The loss per cent is:

- Ans
- 1. $31\frac{6}{7}\%$
 - 2. $28\frac{4}{7}\%$
 - 3. $22\frac{5}{7}\%$
 - 4. $12\frac{3}{7}\%$

Question ID : 65497830682
Status : Answered
Chosen Option : 2

Q.12 Mukul lent ₹9,300 on simple interest in two parts. He earned interest at 5% per annum on the first part and at 8% per annum on the second part. The total interest he received after 4 years is ₹2,400. What is the ratio of the money lent at 5% to that lent at 8%?

- Ans
- 1. 5 : 8
 - 2. 8 : 5
 - 3. 15 : 16
 - 4. 16 : 15

Question ID : 65497830676
Status : Answered
Chosen Option : 4

Q.13 If $x : y = 5 : 2$, then what is $(8x - 9y) : (14x - 13y)$?

- Ans
- 1. 37 : 29
 - 2. 29 : 37
 - 3. 1 : 2
 - 4. 2 : 1

Question ID : 65497830679
Status : Answered
Chosen Option : 3

Q.14 If the difference between the simple interest and compound interest on a sum of money invested for 2 years at the rate of 15% per annum (interest compounded annually) is ₹225, then what is the sum?

- Ans
- 1. ₹8,000
 - 2. ₹9,500
 - 3. ₹10,000
 - 4. ₹9,000

Question ID : 65497830689
Status : Answered
Chosen Option : 3

Q.15 A man covers a certain distance at a speed of 60 km/h and returns at a speed of 40 km/h. What is his average speed (in km/h) for the entire journey?

- Ans
- 1. 48
 - 2. 40
 - 3. 12
 - 4. 50

Question ID : 65497830678
Status : Answered
Chosen Option : 1

Q.16 The ratio of the monthly incomes of Ramu and Somu is 6 : 5 and the ratio of their expenditures is 7 : 6. At the end of the month, Ramu and Somu save ₹1,500 and ₹1,000, respectively. What is Ramu's monthly income?

- Ans
- 1. ₹24,000
 - 2. ₹18,000
 - 3. ₹14,000
 - 4. ₹12,000

Question ID : 65497830688
Status : Answered
Chosen Option : 4

Q.17 If the average of the numbers 5, 7, 9, 12, 13, t, 20 is t, then what is the value of t?

- Ans
- 1. 10
 - 2. 11
 - 3. 15
 - 4. 18

Question ID : 65497830687
Status : Answered
Chosen Option : 2

Q.18 The value of $\frac{3}{4} \div \frac{3}{4}$ of $\frac{3}{4} \times \frac{4}{3} + \frac{5}{2} \div \frac{2}{5}$ of $\frac{5}{4} - \left(\frac{2}{3} - \frac{2}{3}\right)$ of $\frac{5}{6}$ is:

- Ans
- 1. $\frac{10}{3}$
 - 2. $\frac{11}{3}$
 - 3. $\frac{20}{3}$
 - 4. $\frac{22}{3}$

Question ID : 65497830681
Status : Answered
Chosen Option : 3

Q.19 What will be single discount equivalent to three successive discounts of 50%, 30%, and 20%?

- Ans
- 1. 68%
 - 2. 72%
 - 3. 75%
 - 4. 70%

Question ID : 65497830691
Status : Answered
Chosen Option : 2

Q.20 The mean of 15 measurements was calculated to be 50 cm. But it was found that one of the measurements was recorded as 46 cm instead of 61 cm. What is the correct mean (in cm)?

- Ans
- 1. 53
 - 2. 52
 - 3. 55
 - 4. 51

Question ID : 65497830690
Status : Answered
Chosen Option : 4

Q.21 Simplify the following expression.

$$\frac{\frac{3}{4} \text{ of } 1\frac{3}{5} - 1 \times 5 + 2}{24 - 6 \times 2} \div 4$$

- Ans
- 1. $-\frac{3}{80}$
 - 2. $-\frac{1}{192}$
 - 3. $-\frac{29}{720}$
 - 4. $-\frac{29}{240}$

Question ID : 65497830677
Status : Answered
Chosen Option : 4

Q.22 If the difference between two numbers is 42 and their LCM and HCF are 1729 and 7, respectively, what is the sum of those two numbers?

- Ans
- 1. 390
 - 2. 244
 - 3. 420
 - 4. 224

Question ID : 65497830686
Status : Answered
Chosen Option : 4

Q.23 The interest on a certain deposit at 3.5% per annum will be ₹210 in one year. How much will the additional interest in one year be on the same deposit at 4% per annum?

- Ans** ✓ 1. ₹30
✗ 2. ₹49
✗ 3. ₹45
✗ 4. ₹36

Question ID : 65497830698
Status : Answered
Chosen Option : 3

Q.24 The list price of an article is ₹15,000. A trader wants to buy it. He has to choose one out of two discount series — one is 45%, 3%, and 2% and the other is 25%, 12% and 13% — on the list price. How many rupees can he save by choosing right series?

- Ans** ✓ 1. ₹770.55
✗ 2. ₹771.55
✗ 3. ₹773.55
✗ 4. ₹772.55

Question ID : 65497830692
Status : Answered
Chosen Option : 4

Q.25 A car starts at a speed of 80 km/h, with its speed increasing by 8 km/h every two hours. In how many hours will it cover 432 km?

- Ans** ✗ 1. 6 hours 30 minutes
✗ 2. 5 hours 30 minutes
✓ 3. 5 hours
✗ 4. 6 hours

Question ID : 65497830695
Status : Answered
Chosen Option : 1

Section : Part D English

Q.1 Select the INCORRECTLY spelt word.

- Ans** ✓ 1. Flavure
✗ 2. Figure
✗ 3. Leisure
✗ 4. Future

Question ID : 65497830703
Status : Answered
Chosen Option : 1

Q.2 Select the most appropriate ANTONYM of the given word.

Loathe

- Ans 1. Detest
 2. Admire
 3. Abhor
 4. Despise

Question ID : 65497830716
Status : Answered
Chosen Option : 2

Q.3 Select the most appropriate ANTONYM of the given word.

Beneath

- Ans 1. Below
 2. Above
 3. Beyond
 4. Under

Question ID : 65497830701
Status : Answered
Chosen Option : 2

Q.4 Select the most appropriate option that can substitute the underlined segment in the given sentence. If there is no need to substitute it, select 'No substitution required'.

Karan looked everywhere for the pen-drive but could not find it.

- Ans 1. but had not find it
 2. No substitution required
 3. but could not finding it
 4. but could not found it

Question ID : 65497830707
Status : Answered
Chosen Option : 2

Q.5 The following sentence has been divided into parts. One of them may contain an error. Select the part that contains the error from the given options. If you don't find any error, mark 'No error' as your answer.

Unless you don't / work hard, / you will fail.

- Ans 1. you will fail
 2. No error
 3. Unless you don't
 4. work hard

Question ID : 65497830700
Status : Answered
Chosen Option : 3

Q.6 Select the most appropriate meaning of the given idiom.

Blow a fuse

- Ans 1. To feel tired
 2. To feel sick
 3. To work hard aimlessly
 4. To react very angrily

Question ID : 65497830717
Status : Answered
Chosen Option : 4

Q.7 Select the option that can be used as a one-word substitute for the given group of words.

A person who is excessively conceited and self-absorbed

- Ans 1. Fraud
 2. Cheater
 3. Egotist
 4. Deceiver

Question ID : 65497830713
Status : Answered
Chosen Option : 3

Q.8 Select the most appropriate meaning of the given idiom.

The apple of one's eye

- Ans 1. Someone very rich
 2. A person who is very dear
 3. A jolly fellow
 4. A fierce opponent

Question ID : 65497830710
Status : Answered
Chosen Option : 2

Q.9 Select the most appropriate synonym of the given word.

Radical

- Ans 1. Superficial
 2. Minor
 3. Profound
 4. Conservative

Question ID : 65497830712
Status : Answered
Chosen Option : 2

Q.10 Select the most appropriate option to fill in the blank.

The new employee said that he was _____ of doing the job well.

- Ans
- 1. sufficient
 - 2. diffident
 - 3. confident
 - 4. efficient

Question ID : 65497830718
Status : Answered
Chosen Option : 4

Q.11 Select the most appropriate option that can substitute the underlined segment in the given sentence. If there is no need to substitute it, select 'No substitution required'.

Overexposure to the sun while sunbathing not only results in sunburns but also causes premature aging.

- Ans
- 1. No substitution required
 - 2. for sunbathing
 - 3. as sunbathing
 - 4. ever sunbathing

Question ID : 65497830719
Status : Answered
Chosen Option : 1

Q.12 Select the most appropriate option that can substitute the underlined word in the given sentence.

When you give away a secret or an advantage, you reveal a secret or suspension that you should have kept to yourself.

- Ans
- 1. information
 - 2. dereliction
 - 3. revolution
 - 4. benediction

Question ID : 65497830704
Status : Answered
Chosen Option : 1

Q.13 Select the INCORRECTLY spelt word.

- Ans
- 1. Dictate
 - 2. Dictionery
 - 3. Difference
 - 4. Decision

Question ID : 65497830714
Status : Answered
Chosen Option : 2

Q.14 The following sentence has been split into four segments. Identify the segment that contains a grammatical error.

Eighty rupees are / too much for / this leather bag, / which is looking so old.

- Ans
- 1. too much for
 - 2. this leather bag
 - 3. Eighty rupees are
 - 4. which is looking so old

Question ID : 65497830705
Status : Answered
Chosen Option : 3

Q.15 Select the most appropriate option to fill in the blank.

Editing involves _____ and correction with an intention to produce accurate work.

- Ans
- 1. habitation
 - 2. modification
 - 3. fortification
 - 4. modulation

Question ID : 65497830715
Status : Answered
Chosen Option : 2

Q.16 Select the option that can be used as a one-word substitute for the given group of words.

Comparison between things that have similar features

- Ans
- 1. Resemblance
 - 2. Contrast
 - 3. Analogy
 - 4. Description

Question ID : 65497830708
Status : Answered
Chosen Option : 2

Q.17 Select the most appropriate option to fill in the blank.

He applied for official _____ to organise the event.

- Ans
- 1. agreement
 - 2. provision
 - 3. authority
 - 4. permission

Question ID : 65497830709
Status : Answered
Chosen Option : 4

Q.18 Parts of the given sentence have been given as options. One of them contains a grammatical error. Select the option that has the error.

Her friends house is close to the high school where Sarathi teaches.

- Ans
- 1. the high school
 - 2. Her friends
 - 3. teaches
 - 4. close to

Question ID : 65497830711
Status : Answered
Chosen Option : 2

Q.19 Select the most appropriate synonym of the given word.

Competent

- Ans
- 1. Compat ble
 - 2. Capable
 - 3. Comfortable
 - 4. Comparable

Question ID : 65497830706
Status : Answered
Chosen Option : 1

Q.20 Select the option that can be used as a one-word substitute for the given group of words.

Words carved on a stone or monument

- Ans
- 1. Transcription
 - 2. Inscription
 - 3. Prescription
 - 4. Subscription

Question ID : 65497830702
Status : Answered
Chosen Option : 2

Comprehension:

In the following passage, some words have been deleted. Read the passage carefully and select the most appropriate option to fill in each blank.

It has always been (1)_____ dream to live (2)_____ Northbrook Villa. My cousins have been (3)_____ there since a long time. The place is (4)_____ ten kilometres away from my school. I hope father will agree (5)_____ shifting there.

SubQuestion No : 21

Q.21 Select the most appropriate option to fill in blank number 1.

- Ans
- 1. my
 - 2. me
 - 3. mine
 - 4. myself

Question ID : 65497830721
Status : Answered
Chosen Option : 1

Comprehension:

In the following passage, some words have been deleted. Read the passage carefully and select the most appropriate option to fill in each blank.

It has always been (1)_____ dream to live (2)_____ Northbrook Villa. My cousins have been (3)_____ there since a long time. The place is (4)_____ ten kilometres away from my school. I hope father will agree (5)_____ shifting there.

SubQuestion No : 22

Q.22 Select the most appropriate option to fill in blank number 2.

- Ans 1. among
 2. to
 3. in
 4. from

Question ID : 65497830722
Status : Answered
Chosen Option : 3

Comprehension:

In the following passage, some words have been deleted. Read the passage carefully and select the most appropriate option to fill in each blank.

It has always been (1)_____ dream to live (2)_____ Northbrook Villa. My cousins have been (3)_____ there since a long time. The place is (4)_____ ten kilometres away from my school. I hope father will agree (5)_____ shifting there.

SubQuestion No : 23

Q.23 Select the most appropriate option to fill in blank number 3.

- Ans 1. left
 2. live
 3. living
 4. lived

Question ID : 65497830723
Status : Answered
Chosen Option : 3

Comprehension:

In the following passage, some words have been deleted. Read the passage carefully and select the most appropriate option to fill in each blank.

It has always been (1)_____ dream to live (2)_____ Northbrook Villa. My cousins have been (3)_____ there since a long time. The place is (4)_____ ten kilometres away from my school. I hope father will agree (5)_____ shifting there.

SubQuestion No : 24

Q.24 Select the most appropriate option to fill in blank number 4.

- Ans 1. adjectively
 2. advertently
 3. approximately
 4. ambivalently

Question ID : 65497830724
Status : Answered
Chosen Option : 3

Comprehension:

In the following passage, some words have been deleted. Read the passage carefully and select the most appropriate option to fill in each blank.

It has always been (1)_____ dream to live (2)_____ Northbrook Villa. My cousins have been (3)_____ there since a long time. The place is (4)_____ ten kilometres away from my school. I hope father will agree (5)_____ shifting there.

SubQuestion No : 25

Q.25 Select the most appropriate option to fill in blank number 5.

- Ans 1. out
 2. to
 3. from
 4. at

Question ID : 65497830725
Status : Answered
Chosen Option : 4

Section : Part D Hindi

Q.1 दिए गए वाक्य का वह भाग ज्ञात करें जिसमें कोई त्रुटि है। यदि कोई त्रुटि नहीं है, तो 'कोई त्रुटि नहीं है' चुनें।

गले को (1)/ पराधीनता की (2) /बेड़ियाँ पड़ी रही हैं। (3)/ कोई त्रुटि नहीं है (4)

- Ans 1. 1
 2. 4
 3. 2
 4. 3

Question ID : 65497830726
Status : Not Answered
Chosen Option : --

Q.2 'एक काम से दोहरा लाभ प्राप्त करना' यह किस मुहावरे का अर्थ है?

- Ans 1. एक ढेले से दो चिड़िया मारना
 2. एक थैली के चट्टे-बट्टे होना
 3. एक पर एक होना
 4. एक तरकश के तीर होना

Question ID : 65497830729
Status : Not Answered
Chosen Option : --

Q.3 दिये गये वाक्य के किस भाग में त्रुटि है?

वह एक आवश्यकीय कार्य से बाहर गया है।

- Ans 1. आवश्यकीय कार्य
 2. से बाहर
 3. गया है।
 4. वह एक

Question ID : 65497830741
Status : Not Answered
Chosen Option : --

Q.4 तीन वर्षों में होनेवाली- रेखांकित वाक्यांश के लिए एक शब्द का चयन कीजिए-

- Ans 1. त्रैवार्षिक
 2. मासिक
 3. अर्धवार्षिक
 4. वार्षिक

Question ID : 65497830743
Status : Not Answered
Chosen Option : --

Q.5 दिए गए वाक्य का वह भाग ज्ञात करें जिसमें कोई त्रुटि है। यदि कोई त्रुटि नहीं है, तो 'कोई त्रुटि नहीं' विकल्प को चुनें।

झूठ बोलना उसका आदत बन गई है।

- Ans 1. उसका आदत
 2. कोई त्रुटि नहीं
 3. झूठ बोलना
 4. बन गई

Question ID : 65497830730
Status : Not Answered
Chosen Option : --

Q.6 रिक्त स्थान की पूर्ति के लिए सबसे उपयुक्त शब्द का चयन करें।

अब भारत में भी गगनचुम्बी _____ का निर्माण होने लगा है।

- Ans 1. भुवनो
 2. भावन
 3. भावों
 4. भवनो

Question ID : 65497830745
Status : Not Answered
Chosen Option : --

Q.7 दिए गए वाक्य में रेखांकित खंड को प्रतिस्थापित करने के लिए सबसे उपयुक्त विकल्प का चयन करें। यदि इसे प्रतिस्थापित करने की आवश्यकता नहीं है, तो विकल्प 'किसी बदलाव की आवश्यकता नहीं है' का चयन करें।

साहित्य और जीवन का घोर सबध है।

- Ans 1. आत्मीय सबध है।
 2. अनिष्ट सबध है।
 3. अभिन्न सबध है।
 4. किसी बदलाव की आवश्यकता नहीं है।

Question ID : 65497830739
Status : Not Answered
Chosen Option : --

Q.8 मुमुक्षु - रेखांकित शब्द के लिए वाक्यांश का चयन कीजिए-

- Ans 1. जो मोक्ष चाहता हो
 2. जो बहुत ही भूखा हो
 3. जो सुन्दर हो
 4. जो चक्रधारण करता है

Question ID : 65497830744
Status : Not Answered
Chosen Option : --

Q.9 सही वर्तनी वाले शब्द का चयन करें।

- Ans 1. क्रिपया
 2. कृप्या
 3. क्रिईष्य
 4. कृपया

Question ID : 65497830737
Status : Not Answered
Chosen Option : --

Q.10 'विद्युत' का पर्यायवाची है-

- Ans 1. तरिणी
 2. आपगा
 3. वनिता
 4. चपला

Question ID : 65497830742
Status : Not Answered
Chosen Option : --

Q.11 सही वर्तनी वाले शब्द का चयन करें।

- Ans 1. आस्तित्व
 2. अस्तीत्व
 3. अस्तित्व
 4. आस्तितावा

Question ID : 65497830738
Status : Not Answered
Chosen Option : --

Q.12 रिक्त स्थान की पूर्ति के लिए सबसे उपयुक्त शब्द का चयन करें-

सेवा _____ भाव से करनी चाहिए।

- Ans 1. आलस
 2. निःस्वार्थ
 3. स्वार्थ
 4. सजग

Question ID : 65497830735
Status : Not Answered
Chosen Option : --

Q.13 दिए गए वाक्य में रेखांकित खंड को प्रतिस्थापित करने के लिए सबसे उपयुक्त विकल्प का चयन करें।
यदि इसे प्रतिस्थापित करने की आवश्यकता नहीं है, तो विकल्प 'किसी बदलाव की आवश्यकता नहीं है'
का चयन करें।

उसकी अद्वैतदर्शिता के कारण परिवार पर लाखों के कर्ज़ हो गया।

- Ans
- 1. परिवारो पर लाखों के कर्ज़ हो गया ।
 - 2. परिवार पर लाखों के कर्ज़ हो गये ।
 - 3. किसी बदलाव की आवश्यकता नहीं है।
 - 4. परिवार पर लाखों का कर्ज़ हो गया ।

Question ID : 65497830734
Status : Not Answered
Chosen Option : --

Q.14 रिक्त स्थान की पूर्ति के लिए सबसे उपयुक्त शब्द का चयन करें।

उसने अपने विवाह के _____ में पार्टी दी।

- Ans
- 1. उपलक्ष्य
 - 2. समय
 - 3. लिए
 - 4. अवसर

Question ID : 65497830736
Status : Not Answered
Chosen Option : --

Q.15 दिए गए शब्द के समानार्थी शब्द का चयन कीजिए।

शिकारी

- Ans
- 1. आखेटक
 - 2. आखेट
 - 3. अहेर
 - 4. मृगया

Question ID : 65497830727
Status : Not Answered
Chosen Option : --

Q.16 कौनसा विलोम-युग्म सुमेलित नहीं है?

- Ans
- 1. भूगोल-खगोल
 - 2. अनुराग-विराग
 - 3. जय-पराजय
 - 4. शुभ-अनिष्ट

Question ID : 65497830728
Status : Not Answered
Chosen Option : --

Q.17 दिए गये वाक्यांश के लिए एक शब्द दीजिये-

जो सब काम अपने भरोसे करता हो

- Ans
- 1. पराधीन
 - 2. स्वतंत्र
 - 3. परावलंबी
 - 4. स्वावलंबी

Question ID : 65497830733
Status : Not Answered
Chosen Option : --

Q.18 उस विकल्प का चयन कीजिए, जो निम्न मुहावरे का सही अर्थ व्यक्त करता है।

हुक्का-पानी बंद करना

- Ans
- 1. हुक्का पीना
 - 2. डर जाना
 - 3. चकित करना
 - 4. जाति से निकालना

Question ID : 65497830740
Status : Not Answered
Chosen Option : --

Q.19 निम्न वाक्यांश के लिए उचित शब्द का चयन कीजिए।

भक्तों पर कृपा और प्रेम रखनेवाला

- Ans
- 1. भक्त
 - 2. राष्ट्रप्रेमी
 - 3. भक्त वत्सल
 - 4. प्रार्थी

Question ID : 65497830732
Status : Not Answered
Chosen Option : --

Q.20 दिए गए शब्द का विलोम चुनिए।

ऐहिक

- Ans
- 1. नैसर्गिक
 - 2. सात्विक
 - 3. पारलौकिक
 - 4. अलौकिक

Question ID : 65497830731
Status : Not Answered
Chosen Option : --

Comprehension:

दिए गए गद्यांश में से कुछ शब्द हटा दिए गए हैं। इसपर आधारित प्रश्नों में प्रत्येक सख्या के लिए सबसे उपयुक्त विकल्प का चयन करें।

सड़कें (1) _____ हैं। गदा पानी गली-गली में (2) _____। बराबर (3) _____ दी जा रही है कि शहर को (4) _____ रखें। फटी, खुली चीजें मत खाओ। पर (5) _____ सुनता है?

SubQuestion No : 21

Q.21 गद्यांश के रिक्त स्थान (1) के लिए सर्वाधिक उपयुक्त शब्द होगा-

- Ans 1. गदी
 2. चौड़ा
 3. साफ
 4. सुथरे

Question ID : 65497830747

Status : Not Answered

Chosen Option : --

Comprehension:

दिए गए गद्यांश में से कुछ शब्द हटा दिए गए हैं। इसपर आधारित प्रश्नों में प्रत्येक सख्या के लिए सबसे उपयुक्त विकल्प का चयन करें।

सड़कें (1) _____ हैं। गदा पानी गली-गली में (2) _____। बराबर (3) _____ दी जा रही है कि शहर को (4) _____ रखें। फटी, खुली चीजें मत खाओ। पर (5) _____ सुनता है?

SubQuestion No : 22

Q.22 गद्यांश के रिक्त स्थान (2) के लिए सर्वाधिक उपयुक्त शब्द होगा-

- Ans 1. मच गयी है
 2. बह रही है
 3. गिर रहे हैं
 4. फैल रहा है

Question ID : 65497830748

Status : Not Answered

Chosen Option : --

Comprehension:

दिए गए गद्यांश में से कुछ शब्द हटा दिए गए हैं। इसपर आधारित प्रश्नों में प्रत्येक सख्या के लिए सबसे उपयुक्त विकल्प का चयन करें।

सड़कें (1) _____ हैं। गदा पानी गली-गली में (2) _____। बराबर (3) _____ दी जा रही है कि शहर को (4) _____ रखें। फटी, खुली चीजें मत खाओ। पर (5) _____ सुनता है?

SubQuestion No : 23

Q.23 गद्यांश के रिक्त स्थान (3) के लिए सर्वाधिक उपयुक्त शब्द होगा-

- Ans 1. औषधी
 2. खबर
 3. सतर्क
 4. चेतावनी

Question ID : 65497830749

Status : Not Answered

Chosen Option : --

Comprehension:

दिए गए गद्यांश में से कुछ शब्द हटा दिए गए हैं। इसपर आधारित प्रश्नों में प्रत्येक सख्या के लिए सबसे उपयुक्त विकल्प का चयन करें।

सड़कें (1) _____ हैं। गदा पानी गली-गली में (2) _____। बराबर (3) _____ दी जा रही है कि शहर को (4) _____ रखें। फटी, खुली चीजें मत खाओ। पर (5) _____ सुनता है?

SubQuestion No : 24

Q.24 गद्यांश के रिक्त स्थान (4) के लिए सर्वाधिक उपयुक्त शब्द होगा-

- Ans** 1. साफ-सुथरा
 2. कूड़ा
 3. गदगी
 4. मैला

Question ID : **65497830750**
Status : **Not Answered**
Chosen Option : --

Comprehension:

दिए गए गद्यांश में से कुछ शब्द हटा दिए गए हैं। इसपर आधारित प्रश्नों में प्रत्येक सख्या के लिए सबसे उपयुक्त विकल्प का चयन करें।

सड़कें (1) _____ हैं। गदा पानी गली-गली में (2) _____। बराबर (3) _____ दी जा रही है कि शहर को (4) _____ रखें। फटी, खुली चीजें मत खाओ। पर (5) _____ सुनता है?

SubQuestion No : 25

Q.25 गद्यांश के रिक्त स्थान (5) के लिए सर्वाधिक उपयुक्त शब्द होगा-

- Ans** 1. यह
 2. किसने
 3. कौन
 4. वह

Question ID : **65497830751**
Status : **Not Answered**
Chosen Option : --

**SSC
GD**

**Previous Year Paper
18 Nov 2021 Shift 3**

Constable GD in CAPFs NIA SSF and Rifleman GD in Assam Rifles Examination 2021

Roll Number	
Candidate Name	
Venue Name	Indian Institute Of Computer Education - CENTER 2
Exam Date	18/11/2021
Exam Time :	4:00 PM - 5:30 PM
Subject	Constable GD 2021

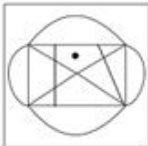
Section : Part A General Intelligence and Reasoning

Q.1 Select the option in which the given figure is embedded (rotation is NOT allowed).

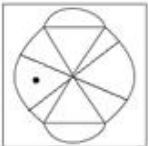


Ans

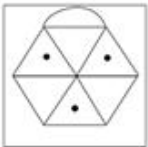
✗ 1.



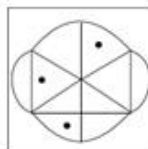
✗ 2.



✗ 3.



✓ 4.



Question ID : 65497832788

Status : Answered

Chosen Option : 4

Q.2 Study the given pattern carefully and select the number that can replace the question mark (?) in it.

64 12 27
216 ? 343
512 40 125

- Ans 1. 64
 2. 72
 3. 42
 4. 95

Question ID : 65497832795
Status : Answered
Chosen Option : 3

Q.3 Two different positions of the same dice marked with the numbers I, II, III, IV, V and VI are shown.
Select the number that will be on the face opposite to the face having the number 'IV'.



- Ans 1. III
 2. II
 3. V
 4. VI

Question ID : 65497832787
Status : Answered
Chosen Option : 1

Q.4 In a certain code language, 'SLAM' is coded as '5736339', and 'TOY' is coded as '604575'.
How will 'CLEAR' be coded in that language?

- Ans 1. 93612651
 2. 93618357
 3. 93615354
 4. 63915354

Question ID : 65497832806
Status : Answered
Chosen Option : 3

Q.5 Select the letter-cluster from among the given options that can replace the question mark (?) in the following series.

UKT, PFO, KAJ, ?

- Ans 1. GHM
 2. FVE
 3. EVO
 4. FEQ

Question ID : 65497832798
Status : Answered
Chosen Option : 2

Q.6 Rohit donates 15% of his monthly income to charity funds. The remaining income is spent in the following manner: 35% on food, 20% on rent, 17% on bills, 8% on clothing, and the remaining is kept as savings. If the amount saved each month is ₹14,620, then what is Rohit's monthly income?

- Ans**
- 1. ₹86,000
 - 2. ₹75,300
 - 3. ₹82,000
 - 4. ₹73,100

Question ID : 65497832796
 Status : Answered
 Chosen Option : 1

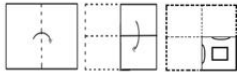
Q.7 In an imaginary mathematical system, symbol '-' stands for addition, symbol '+' stands for division, symbol 'x' stands for subtraction, and symbol '÷' stands for multiplication. What is the value of the following expression?

$$144 \times 35 + 7 \div 12 - 3$$

- Ans**
- 1. 107
 - 2. 43
 - 3. 87
 - 4. 95

Question ID : 65497832786
 Status : Answered
 Chosen Option : 3

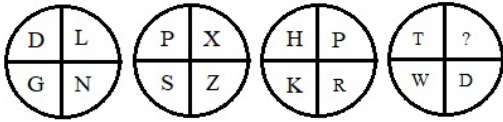
Q.8 The sequence of folding a piece of paper and the manner in which the folded paper has been cut is shown in the following figures. How would this paper look when unfolded?



- Ans**
- 1.
 - 2.
 - 3.
 - 4.

Question ID : 65497832797
 Status : Answered
 Chosen Option : 2

Q.9 Study the given pattern carefully and select the letter that can replace the question mark (?) in it.



- Ans
- 1. A
 - 2. Z
 - 3. B
 - 4. Y

Question ID : 65497832790
Status : Answered
Chosen Option : 2

Q.10 In a certain code language, 'CALM' is written as 'DCOQ'. How will 'COOK' be written in that language?

- Ans
- 1. DORQ
 - 2. DPRQ
 - 3. DROQ
 - 4. DQRO

Question ID : 65497832793
Status : Answered
Chosen Option : 4

Q.11 Select the option that is related to the third term in the same way as the second term is related to the first term.

INSERT: NIXZTR:: SECOND: ?

- Ans
- 1. ESJDHN
 - 2. EHSDJN
 - 3. ESHJDN
 - 4. EHHJND

Question ID : 65497832802
Status : Answered
Chosen Option : 3

Q.12 Identify the number that does NOT belong to the following series.

16, 17, 25, 52, 116, 243


- Ans
- 1. 52
 - 2. 116
 - 3. 25
 - 4. 243

Question ID : 65497832807
Status : Answered
Chosen Option : 4

Q.13 Select the Venn diagram that best represents the relationship between the following classes.

Earth, Forest, Trees

Ans



Question ID : 65497832801
Status : Answered
Chosen Option : 1

Q.14 Ravali does not have any brother. Girima is the wife of Arjun. Zakir is the husband of Malavi. Chaya is the daughter of Ravali. Fatima is the daughter of Arjun. Malavi is the mother of Ravali. Girima is the maternal aunt of Chaya. How is Girima related to Zakir?

Ans ✓ 1. Daughter

✗ 2. Sister

✗ 3. Daughter-in-law

✗ 4. Sister-in-law

Question ID : 65497832804
Status : Answered
Chosen Option : 1

Q.15 'Factory' is related to 'Manufacture' in the same way as 'Kitchen' is related to '_____'.

Ans ✓ 1. Cook

✗ 2. Fruits

✗ 3. Plan

✗ 4. Vegetables

Question ID : 65497832799
Status : Answered
Chosen Option : 1

Q.16 Four letter-clusters have been given, out of which three are alike in some manner and one is different. Select the one that is different.

- Ans
- 1. LGB
 - 2. MHC
 - 3. FAU
 - 4. ZUP

Question ID : 65497832805
Status : Answered
Chosen Option : 3

Q.17 In a certain code language, 'MAGNET' is written as 'HFTIJO'. How will 'CULPRIT' be written in that language?

- Ans
- 1. XZOKINO
 - 2. XZGKMNO
 - 3. XPGUWDO
 - 4. XPQUMNO

Question ID : 65497832803
Status : Answered
Chosen Option : 2

Q.18 Select the number from among the given options that can replace the question mark (?) in the following series.

1, 2, 9, 64, ?

- Ans
- 1. 570
 - 2. 225
 - 3. 625
 - 4. 450

Question ID : 65497832791
Status : Answered
Chosen Option : 3

Q.19 Select the correct option that indicates the arrangement of the given words in the order in which they appear in an English dictionary.

- i. Monkey
- ii. Money
- iii. Monotony
- iv. Monarch
- v. Monster

- Ans
- 1. iv, iii, i, ii, v
 - 2. iv, ii, i, iii, v
 - 3. ii, i, iv, v, iii
 - 4. i, ii, iii, iv, v

Question ID : 65497832789
Status : Answered
Chosen Option : 2

Q.20 Select the correct mirror image of the given combination when the mirror is placed to its right side.

6 T Y G z 2

Ans

1. Z Z Ɔ Y T Ɔ

2. 5 5 Ɔ Y T Ɔ

3. 5 5 Ɔ ʌ T Ɔ

4. Ɔ 1 ʌ Ɔ 5 5

Question ID : 65497832808

Status : Answered

Chosen Option : 2

Q.21 Six friends, P, Q, R, S, T and U, are sitting around a circular table at equal distance between each other, facing the centre. S is sitting between U and Q. P is second to the left of S and second to the right of T. Q is sitting between T and S. Who is sitting opposite to S?

Ans

1. U

2. R

3. P

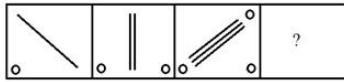
4. T

Question ID : 65497832800

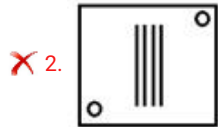
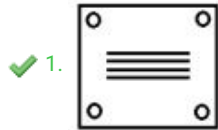
Status : Answered

Chosen Option : 2

Q.22 Select the figure from among the given options that can replace the question mark (?) in the following series.



Ans



Question ID : 65497832792

Status : Answered

Chosen Option : 1

Q.23 Read the given statements and conclusions carefully. Assuming that the information given in the statements is true, even if it appears to be at variance with commonly known facts, decide which of the given conclusions logically follow(s) from the statements.

Statements:

All fruits are stems.

Some fruits are leaves.

Conclusions:

I. Some stems are leaves.

II. Some leaves are fruits.

Ans ✗ 1. Neither conclusion I nor II follows

✗ 2. Only conclusion I follows

✓ 3. Both conclusions I and II follow

✗ 4. Only conclusion II follows

Question ID : 65497832794

Status : Answered

Chosen Option : 3

Q.24 Select the option that is related to the third number in the same way as the second number is related to the first number.

11 : 121 :: 17 : ?

- Ans
- 1. 256
 - 2. 289
 - 3. 305
 - 4. 360

Question ID : 65497832785
Status : Answered
Chosen Option : 2

Q.25 Six students, Anima, Rohit, Kiran, Seema, Jaya and Manish, are top six rank holders in a school. The rank of Rohit is between the ranks of Kiran and Seema. Rohit is at the fourth rank. There are two students between the ranks of Jaya and Seema. Jaya is at the lowest rank among all the six students. The rank of Manish is immediately above the rank of Anima.

Who is at the fifth rank?

- Ans
- 1. Seema
 - 2. Kiran
 - 3. Anima
 - 4. Manish

Question ID : 65497832784
Status : Answered
Chosen Option : 2

Section : Part B General Knowledge and General Awareness

Q.1 Which of the following conditions could harm coffee plantations?

- Ans
- 1. Loamy soil containing humus and minerals such as iron and calcium
 - 2. Hot and humid climate
 - 3. Rains at the time of ripening of the berries
 - 4. Rainfall between 150 and 250 cm

Question ID : 65497832831
Status : Answered
Chosen Option : 2

Q.2 FPI consists of securities and other financial assets passively held by foreign investors. What is the full form of FPI?

- Ans
- 1. Final Payment Investment
 - 2. Final Portfolio Investment
 - 3. Foreign Payment Investment
 - 4. Foreign Portfolio Investment

Question ID : 65497832815
Status : Answered
Chosen Option : 4

Q.3 Who is the author of the book, 'Walking with the comrades'?

- Ans 1. Arundhati Roy
 2. Vikram Seth
 3. Kiran Desai
 4. Jhumpa Lahiri

Question ID : 65497832814
Status : Answered
Chosen Option : 4

Q.4 In September 2021, _____ became the first IAS officer to win a medal at the Paralympics.

- Ans 1. Nishad Kumar
 2. Devendra Jhajharia
 3. Singhraj Adhana
 4. Suhas Yathiraj

Question ID : 65497832833
Status : Answered
Chosen Option : 2

Q.5 Under which of the following Schedules of the Indian Wildlife (Protection) Act, 1972 are the Gangetic Dolphins protected?

- Ans 1. Fifth Schedule
 2. Seventh Schedule
 3. Third Schedule
 4. First Schedule

Question ID : 65497832827
Status : Answered
Chosen Option : 2

Q.6 A spring at Verinag is the source of _____ river in the northern part of India.

- Ans 1. Beas
 2. Jhelum
 3. Ravi
 4. Chenab

Question ID : 65497832823
Status : Answered
Chosen Option : 3

Q.7 In which country or state of India is Tengboche Monastery located?

- Ans 1. Sikkim
 2. Arunachal Pradesh
 3. Bhutan
 4. Nepal

Question ID : 65497832811
Status : Answered
Chosen Option : 2

Q.8 निम्नलिखित में से कौन सा पारिभाषिक शब्द उन प्रजातियों के लिए प्रयुक्त है जो स्थानीय आवास के प्राकृतिक आवासी नहीं हैं, लेकिन इस तंत्र में शामिल होते हैं?

- Ans
- 1. अजैव (Abiotic)
 - 2. जीवोम (Biome)
 - 3. स्थानिक (Endemic)
 - 4. विजातीय (Exotic)

Question ID : 65497832810
Status : Answered
Chosen Option : 4

Q.9 In which year was the Treaty of Bassein signed between Bajji Rao II, the Maratha Peshwa of Poona in India, and the British?

- Ans
- 1. 1820
 - 2. 1810
 - 3. 1802
 - 4. 1801

Question ID : 65497832820
Status : Answered
Chosen Option : 3

Q.10 Lieutenant General Gurmit Singh was appointed as the Governor of _____ in September 2021.

- Ans
- 1. Tamil Nadu
 - 2. Uttarakhand
 - 3. Punjab
 - 4. Nagaland

Question ID : 65497832832
Status : Answered
Chosen Option : 2

Q.11 What special name is given to the frictional force exerted by a fluid?

- Ans
- 1. Shear
 - 2. Surface tension
 - 3. Buoyancy
 - 4. Drag

Question ID : 65497832813
Status : Answered
Chosen Option : 4

Q.12 The tomb of Itmad-ud-Daula (or Itimad-Ud-Daulah) is situated in _____.

- Ans
- 1. Fatehpur Sikri
 - 2. Shahjahanabad
 - 3. Aurangabad
 - 4. Agra

Question ID : 65497832829
Status : Answered
Chosen Option : 4

Q.13 The last Nawab of Awadh was _____.

- Ans
- 1. Wajid Ali Shah
 - 2. Mir Jafar
 - 3. Alivardi Khan
 - 4. Mansur Ali Khan

Question ID : 65497832825
Status : Answered
Chosen Option : 2

Q.14 The Budget Division that prepares the Union Budget of India is a part of the Department of _____ under the Ministry of Finance.

- Ans
- 1. Investment and Public Asset Management
 - 2. Economic Affairs
 - 3. Financial Services
 - 4. Revenue

Question ID : 65497832830
Status : Answered
Chosen Option : 3

Q.15 Which fort is regarded as the first pillar of Maratha empire?

- Ans
- 1. Sindhudurg
 - 2. Rajgad
 - 3. Prachandagad
 - 4. Panhala

Question ID : 65497832826
Status : Answered
Chosen Option : 3

Q.16 Who was appointed as India's Ambassador to Cambodia in October 2020?

- Ans
- 1. K Nandini Singla
 - 2. Manika Jain
 - 3. Narinder Chauhan
 - 4. Devyani Uttam Khobragade

Question ID : 65497832822
Status : Answered
Chosen Option : 3

Q.17 Under which Amendment was Goa accorded the status of full-fledged state?

- Ans
- 1. 71st
 - 2. 56th
 - 3. 52nd
 - 4. 61st

Question ID : 65497832821
Status : Answered
Chosen Option : 3

Q.18 Which of the following teams became the runner-up at IPL 2020?

- Ans
- 1. Sunrisers Hyderabad
 - 2. Delhi Capitals
 - 3. Royal Challengers Bangalore
 - 4. Mumbai Indians

Question ID : 65497832809
Status : Answered
Chosen Option : 4

Q.19 How much funds were allocated for senior citizens and persons with disabilities in Union Budget 2020?

- Ans
- 1. ₹9,500 Cr
 - 2. ₹10,000 Cr
 - 3. ₹7,500 Cr
 - 4. ₹8,500 Cr

Question ID : 65497832819
Status : Answered
Chosen Option : 3

Q.20 An inscription comprising ten large sized signs of Harappan script was found at:

- Ans
- 1. Banawali
 - 2. Kot Diji
 - 3. Dholavira
 - 4. Kalibangan

Question ID : 65497832817
Status : Answered
Chosen Option : 3

Q.21 The 'International Satavadhanam' program, launched virtually by the Vice President in November 2020 is related to:

- Ans 1. Literature
 2. Indian Navy
 3. Food safety
 4. Medicine

Question ID : 65497832818
Status : Answered
Chosen Option : 3

Q.22 Which of the following countries is the second largest steel producer in the world as per the World Steel Association (worldsteel) as of October 2020?

- Ans 1. Japan
 2. China
 3. Myanmar
 4. India

Question ID : 65497832828
Status : Answered
Chosen Option : 4

Q.23 If n is the energy level index for an atom, then for the M shell, n is equal to:

- Ans 1. 1
 2. 2
 3. 4
 4. 3

Question ID : 65497832812
Status : Answered
Chosen Option : 4

Q.24 Where was the National Badminton Championship 2019 held?

- Ans 1. Chandigarh
 2. Lucknow
 3. Guwahati
 4. Indore

Question ID : 65497832824
Status : Answered
Chosen Option : 4

Q.25 Which of the following diseases is caused by a virus transmitted primarily by *Aedes* mosquitoes?

- Ans
- 1. Tularemia
 - 2. Malaria
 - 3. Zika fever
 - 4. Minamata

Question ID : 65497832816
Status : Answered
Chosen Option : 2

Section : Part C Elementary Mathematics

Q.1 A certain sum amounts to ₹17,925 in 3 years and to ₹21,825 in 7 years at the same rate per cent per annum at simple interest. What will be the simple interest (in ₹) on a sum of ₹18,500 for $4\frac{2}{5}$ years at double the earlier rate?

- Ans
- 1. 10,582
 - 2. 8,245
 - 3. 9,876
 - 4. 7,625

Question ID : 65497832835
Status : Answered
Chosen Option : 1

Q.2 When an article is sold for ₹242.50, there is a loss of 3%. What will be the selling price, if the article is sold at a gain of 13%?

- Ans
- 1. ₹275.80
 - 2. ₹282.50
 - 3. ₹270.40
 - 4. ₹300.60

Question ID : 65497832851
Status : Answered
Chosen Option : 2

Q.3 The average of three numbers is 180. If the third number is greater by 10 than $\frac{1}{3}$ of the first number and less by 5 than the second number, then the third number is:

- Ans
- 1. 103
 - 2. 113
 - 3. 118
 - 4. 115

Question ID : 65497832846
Status : Answered
Chosen Option : 2

Q.4 A person can row a yacht along the stream at a speed of 9 km/h and against the stream at a speed of 7 km/h. The speed of the stream is:

- Ans**
- 1. $\frac{3}{4}$ km/h
 - 2. 2 km/h
 - 3. 1.5 km/h
 - 4. 1 km/h

Question ID : 65497832850
Status : Answered
Chosen Option : 4

Q.5 A shopkeeper sold $\frac{1}{4}$ of his stock at a gain of 25%, and the remaining stock at a gain of 19%. His total percentage of gain was:

- Ans**
- 1. 12.9%
 - 2. 20.5%
 - 3. 18.7%
 - 4. 22.5%

Question ID : 65497832834
Status : Answered
Chosen Option : 2

Q.6 A shoe company offers a discount of 25% and then a further discount of 42%. What is the final sale price (in ₹) of a pair of shoes costing ₹2,800?

- Ans**
- 1. 1,228
 - 2. 1,210
 - 3. 1,218
 - 4. 1,220

Question ID : 65497832855
Status : Answered
Chosen Option : 3

Q.7 Find the value of $[52 - 4 \text{ of } (17 - 12) + 4 \times 7] \div [30 \div 15 \times 5]$.

- Ans**
- 1. 10
 - 2. 6
 - 3. 8
 - 4. 12

Question ID : 65497832842
Status : Answered
Chosen Option : 2

Q.8 A vendor bought candies at 12 for ₹20 and sold them at 6 for ₹12. Find his percentage gain or loss.

- Ans
- 1. 20% gain
 - 2. 30% loss
 - 3. 15% gain
 - 4. 25% loss

Question ID : 65497832853
Status : Answered
Chosen Option : 1

Q.9 The average of ten consecutive odd numbers is 46. The average of smallest and the greatest number is:

- Ans
- 1. 46
 - 2. 50
 - 3. 54
 - 4. 38

Question ID : 65497832837
Status : Answered
Chosen Option : 1

Q.10 Find the value of $5 \div [6 \text{ of } 2 + (3 \times 7 \div (5 \text{ of } 3))]$.

- Ans
- 1. $\frac{17}{25}$
 - 2. $\frac{67}{15}$
 - 3. $\frac{25}{67}$
 - 4. $\frac{67}{5}$

Question ID : 65497832852
Status : Answered
Chosen Option : 3

Q.11 A sum at a certain rate of simple interest becomes ₹37,200 after 3 years and ₹42,000 after 5 years. Find the simple interest (in ₹) on the same sum at 6% per annum for 8 years.

- Ans
- 1. 14,000
 - 2. 14,750
 - 3. 14,400
 - 4. 14,260

Question ID : 65497832857
Status : Answered
Chosen Option : 3

Q.12 If P can complete $\frac{1}{3}$ of a work in 6 days and Q can complete $\frac{1}{4}$ of the same work in 9 days, how much will Q get if both work together and are paid in advance ₹210 in all?

- Ans**
- 1. ₹140
 - 2. ₹95
 - 3. ₹70
 - 4. ₹105

Question ID : 65497832854
Status : Answered
Chosen Option : 1

Q.13 Two numbers are in the ratio of 3 : 4. If 60% of the first number is 144, then 30% of the second number will be:

- Ans**
- 1. 120
 - 2. 69
 - 3. 96
 - 4. 92

Question ID : 65497832848
Status : Answered
Chosen Option : 3

Q.14 If $\frac{a}{b} : \frac{7}{5}$, then what will be the value of $\frac{(5a+4b)}{5a-4b}$?

- Ans**
- 1. $\frac{3}{11}$
 - 2. $\frac{7}{8}$
 - 3. $\frac{11}{3}$
 - 4. $\frac{5}{7}$

Question ID : 65497832840
Status : Answered
Chosen Option : 3

Q.15 A man goes to his office from his house at a speed of 4 km/h and returns at a speed of 2 km/h. If he takes 6 hours in going and coming, what is the distance between his house and office?

- Ans**
- 1. 4 km
 - 2. 6 km
 - 3. 8 km
 - 4. 8.5 km

Question ID : 65497832843
Status : Answered
Chosen Option : 3

Q.16 Two numbers are 8% and 28%, respectively, more than a third number. What is the ratio between the two numbers?

- Ans**
- 1. 5 : 9
 - 2. 5 : 6
 - 3. 27 : 32
 - 4. 2 : 7

Question ID : 65497832856
Status : Answered
Chosen Option : 3

Q.17 If X and Y together can complete a work in 10 days, Y and Z can complete the work in 12 days, and Z and X can complete the work in 15 days, then X alone will complete the work in:

- Ans**
- 1. 28 days
 - 2. 20 days
 - 3. 30 days
 - 4. 24 days

Question ID : 65497832849
Status : Answered
Chosen Option : 4

Q.18 A sum of ₹ x is divided between A, B and C such that the ratio of shares of A and B is 3 : 5 and that of B and C is 4 : 7. If the difference between the shares of B and C is ₹1,455, then the value of x is:

- Ans**
- 1. ₹6,944
 - 2. ₹3,395
 - 3. ₹6,499
 - 4. ₹5,335

Question ID : 65497832838
Status : Answered
Chosen Option : 3

Q.19 A conical cavity is drilled in a solid right circular cylinder of 6 cm height and 16 cm base diameter. The height and the base diameter of the cone are the same as those of the cylinder. Determine total surface area of the remaining solid?

- Ans**
- 1. $440 \pi \text{ cm}^2$
 - 2. $220 \pi \text{ cm}^2$
 - 3. $240 \pi \text{ cm}^2$
 - 4. $210 \pi \text{ cm}^2$

Question ID : 65497832841
Status : Answered
Chosen Option : 3

Q.20 Divide ₹12,100 into 2 parts such that when these are invested for 3 and 4 years, respectively, at the rate of 6 % per annum simple interest, the amounts received are equal. What is 75% of the difference between the two parts (in ₹)?

- Ans**
- 1. 300
 - 2. 225
 - 3. 400
 - 4. 200

Question ID : 65497832839
Status : Answered
Chosen Option : 2

Q.21 A shopkeeper bought 600 oranges and 400 bananas. He found that 30% of oranges and 18% of bananas were rotten. Find the percentage of the fruits in good condition.

- Ans**
- 1. 70.8
 - 2. 64.8
 - 3. 74.8
 - 4. 78.8

Question ID : 65497832845
Status : Answered
Chosen Option : 3

Q.22 A metallic slab having dimensions $16\text{ cm} \times 12\text{ cm} \times 9\text{ cm}$ is melted and recast in the shape of a cube. What is the surface area (in cm^2) of the cube?

- Ans**
- 1. 865
 - 2. 860
 - 3. 880
 - 4. 864

Question ID : 65497832858
Status : Answered
Chosen Option : 4

Q.23 The sum of two numbers is 342 and their HCF is 19. How many pairs of such numbers can be formed?

- Ans**
- 1. 3
 - 2. 2
 - 3. 4
 - 4. 6

Question ID : 65497832836
Status : Answered
Chosen Option : 1

Q.24 A shopkeeper offers 25% discount on the Marked Price. Another shopkeeper offers three successive discounts of 5%, 12% and 10% on the same Marked Price. The difference between the discounts given by two shopkeepers is:

- Ans
- 1. 1.12%
 - 2. 0.24%
 - 3. 2.00%
 - 4. 1.00%

Question ID : 65497832847
Status : Answered
Chosen Option : 2

Q.25 There is a number greater than 1 which when divided by 4, 5 and 6 leaves the same remainder 3 in each case. Find the largest number, smaller than 500 which satisfies the given condition.

- Ans
- 1. 493
 - 2. 484
 - 3. 483
 - 4. 486

Question ID : 65497832844
Status : Answered
Chosen Option : 3

Section : Part D English

Q.1 Select the most appropriate option that can substitute the underlined segment in the given sentence. If there is no need to substitute it, select 'No substitution required'.

Are you get irritated if someone disturbs you?

- Ans
- 1. Do you get irritated
 - 2. No substitution required
 - 3. Are you get irritate
 - 4. Did you getting irritating

Question ID : 65497832874
Status : Answered
Chosen Option : 1

Q.2 Select the most appropriate option to fill in the blank.

It is essential to understand consumer behaviour so that protective _____ can be taken through legislation.

- Ans
- 1. methods
 - 2. events
 - 3. measures
 - 4. dealings

Question ID : 65497832863
Status : Answered
Chosen Option : 3

Q.3 Select the most appropriate SYNONYM of the given word.

Supreme

- Ans 1. Endless
 2. Matchless
 3. Careless
 4. Useless

Question ID : 65497832876
Status : Answered
Chosen Option : 2

Q.4 Select the most appropriate meaning of the given idiom.

All and sundry

- Ans 1. None
 2. Everywhere
 3. Very few
 4. Everyone

Question ID : 65497832869
Status : Answered
Chosen Option : 4

Q.5 Select the most appropriate ANTONYM of the given word.

Beseech

- Ans 1. Command
 2. Appeal
 3. Request
 4. Engage

Question ID : 65497832866
Status : Answered
Chosen Option : 4

Q.6 Select the most appropriate ANTONYM of the given word.

Ravish

- Ans 1. Captivate
 2. Attract
 3. Repel
 4. Charm

Question ID : 65497832871
Status : Answered
Chosen Option : 4

Q.7 Select the option that can be used as a one-word substitute for the given group of words.

Something that can be carried easily

- Ans 1. Portable
 2. Transferable
 3. Deliverable
 4. Plausible

Question ID : 65497832867
Status : Answered
Chosen Option : 1

Q.8 Select the INCORRECTLY spelt word.

- Ans 1. Infectious
 2. Valuable
 3. Specieal
 4. Precious

Question ID : 65497832862
Status : Answered
Chosen Option : 3

Q.9 Select the most appropriate option to fill in the blank.

After hours of discussion, the team _____ at the same conclusion.

- Ans 1. came
 2. arrived
 3. reached
 4. attained

Question ID : 65497832872
Status : Answered
Chosen Option : 2

Q.10 Select the most appropriate option that can substitute the underlined word in the given sentence.

The bacteria in the roots of leguminous plants submerge nitrogen in the soil to compounds.

- Ans 1. propose
 2. expand
 3. convert
 4. analyse

Question ID : 65497832859
Status : Answered
Chosen Option : 3

Q.11 The following sentence has been split into four segments. Identify the segment that contains a grammatical error.

I have been / reading this book / since / two days.

- Ans
- 1. two days
 - 2. since
 - 3. I have been
 - 4. reading this book

Question ID : 65497832865
Status : Answered
Chosen Option : 2

Q.12 Select the option that can be used as a one-word substitute for the given group of words.

One who can use either hand easily

- Ans
- 1. Skilled
 - 2. Disabled
 - 3. Single-handed
 - 4. Ambidextrous

Question ID : 65497832864
Status : Answered
Chosen Option : 4

Q.13 Select the most appropriate synonym of the given word.

Lure

- Ans
- 1. Attraction
 - 2. Warning
 - 3. Repulsion
 - 4. Indication

Question ID : 65497832861
Status : Answered
Chosen Option : 1

Q.14 The following sentence has been divided into parts. One of them may contain an error. Select the part that contains the error from the given options. If you don't find any error, select 'No error' as your answer.

Praneel is only two now / so he has not / started talk yet.

- Ans
- 1. started talk yet
 - 2. Praneel is only two now
 - 3. so he has not
 - 4. No error

Question ID : 65497832860
Status : Answered
Chosen Option : 1

Q.15 Select the most appropriate meaning of the given idiom.

Hold your horses

- Ans
- 1. Run fast
 - 2. Make a profit
 - 3. Be patient
 - 4. Take control

Question ID : 65497832878
Status : Answered
Chosen Option : 3

Q.16 The following sentence has been split into four segments. Identify the segment that contains a grammatical error.

Did the police find out who break into your store?

- Ans
- 1. your store
 - 2. who break into
 - 3. Did the police
 - 4. find out

Question ID : 65497832875
Status : Answered
Chosen Option : 4

Q.17 Select the most appropriate option to fill in the blank.

He _____ her that he had deposited the money in the bank.

- Ans
- 1. assumed
 - 2. ensured
 - 3. assured
 - 4. insured

Question ID : 65497832870
Status : Answered
Chosen Option : 2

Q.18 Select the most appropriate option that can substitute the underlined segment in the given sentence. If there is no need to substitute it, select 'No substitution required'.

The shopkeeper either offered to exchange the goods or refund the money.

- Ans
- 1. The shopkeeper offered either to
 - 2. No substitution required'
 - 3. The shopkeeper neither offered to
 - 4. Either the shopkeeper offered to

Question ID : 65497832873
Status : Answered
Chosen Option : 1

Q.19 Select the option that can be used as a one-word substitute for the given group of words.

A piece of land entirely surrounded by water

- Ans
- 1. Igloo
 - 2. Harbour
 - 3. Island
 - 4. Oasis

Question ID : 65497832877
Status : Answered
Chosen Option : 3

Q.20 Select the INCORRECTLY spelt word.

- Ans
- 1. Estimation
 - 2. Substitution
 - 3. Habbitation
 - 4. Presentation

Question ID : 65497832868
Status : Answered
Chosen Option : 3

Comprehension:

In the following passage, some words have been deleted. Read the passage carefully and select the most appropriate option to fill in each blank.

The plane had been hired to transport Appu, the baby elephant, as a gift from India to Nigeria. Just before the (1) _____, the co-pilot checked the wooden crate and (2) _____ that it looked safe. Little did he know how (3) _____ the flight was going to be. When the plane was (4) _____ Kenya, Appu broke his crate and (5) _____ the flight cabin. The pilot made an emergency landing in Kenya.

SubQuestion No : 21

Q.21 Select the most appropriate option to fill in blank no.1.

- Ans
- 1. departure
 - 2. escape
 - 3. retreat
 - 4. evacuation

Question ID : 65497832880
Status : Answered
Chosen Option : 1

Comprehension:

In the following passage, some words have been deleted. Read the passage carefully and select the most appropriate option to fill in each blank.

The plane had been hired to transport Appu, the baby elephant, as a gift from India to Nigeria. Just before the (1) _____, the co-pilot checked the wooden crate and (2) _____ that it looked safe. Little did he know how (3) _____ the flight was going to be. When the plane was (4) _____ Kenya, Appu broke his crate and (5) _____ the flight cabin. The pilot made an emergency landing in Kenya.

SubQuestion No : 22

Q.22 Select the most appropriate option to fill in blank no.2.

- Ans 1. described
 2. recited
 3. reported
 4. narrated

Question ID : 65497832881

Status : Answered

Chosen Option : 3

Comprehension:

In the following passage, some words have been deleted. Read the passage carefully and select the most appropriate option to fill in each blank.

The plane had been hired to transport Appu, the baby elephant, as a gift from India to Nigeria. Just before the (1) _____, the co-pilot checked the wooden crate and (2) _____ that it looked safe. Little did he know how (3) _____ the flight was going to be. When the plane was (4) _____ Kenya, Appu broke his crate and (5) _____ the flight cabin. The pilot made an emergency landing in Kenya.

SubQuestion No : 23

Q.23 Select the most appropriate option to fill in blank no.3.

- Ans 1. impressive
 2. unreliable
 3. devious
 4. dramatic

Question ID : 65497832882

Status : Answered

Chosen Option : 4

Comprehension:

In the following passage, some words have been deleted. Read the passage carefully and select the most appropriate option to fill in each blank.

The plane had been hired to transport Appu, the baby elephant, as a gift from India to Nigeria. Just before the (1) _____, the co-pilot checked the wooden crate and (2) _____ that it looked safe. Little did he know how (3) _____ the flight was going to be. When the plane was (4) _____ Kenya, Appu broke his crate and (5) _____ the flight cabin. The pilot made an emergency landing in Kenya.

SubQuestion No : 24**Q.24 Select the most appropriate option to fill in blank no.4.**

- Ans 1. on
 2. between
 3. over
 4. beside

Question ID : 65497832883

Status : Answered

Chosen Option : 3

Comprehension:

In the following passage, some words have been deleted. Read the passage carefully and select the most appropriate option to fill in each blank.

The plane had been hired to transport Appu, the baby elephant, as a gift from India to Nigeria. Just before the (1) _____, the co-pilot checked the wooden crate and (2) _____ that it looked safe. Little did he know how (3) _____ the flight was going to be. When the plane was (4) _____ Kenya, Appu broke his crate and (5) _____ the flight cabin. The pilot made an emergency landing in Kenya.

SubQuestion No : 25**Q.25 Select the most appropriate option to fill in blank no.5.**

- Ans 1. entered
 2. chased
 3. shared
 4. grabbed

Question ID : 65497832884

Status : Answered

Chosen Option : 1

Section : Part D Hindi

Q.1 दिए गए वाक्य में रेखांकित खंड को प्रतिस्थापित करने के लिए सबसे उपयुक्त विकल्प का चयन करें। यदि इसे प्रतिस्थापित करने की आवश्यकता नहीं है, तो विकल्प 'किसी बदलाव की आवश्यकता नहीं है' का चयन करें।

हम भोजन खाते हैं।

- Ans 1. किसी बदलाव की आवश्यकता नहीं है।
 2. करते हैं
 3. लेते हैं
 4. पाते हैं

Question ID : 65497832894

Status : Not Answered

Chosen Option : --

Q.2 दिए गए वाक्य में रेखांकित खंड को प्रतिस्थापित करने के लिए सबसे उपयुक्त विकल्प का चयन करें। यदि इसे प्रतिस्थापित करने की आवश्यकता नहीं है, तो विकल्प 'किसी बदलाव की आवश्यकता नहीं है' का चयन करें।

सब लोग अपनी राय दें।

- Ans
- 1. इनकी
 - 2. उनकी
 - 3. अपनी-अपनी
 - 4. किसी बदलाव की आवश्यकता नहीं है।

Question ID : 65497832896
Status : Not Answered
Chosen Option : --

Q.3 'जलाशय' का पर्यायवाची है-

- Ans
- 1. महीधर
 - 2. रत्नाकर
 - 3. पद्माकर
 - 4. जलधर

Question ID : 65497832898
Status : Not Answered
Chosen Option : --

Q.4 दिए गए वाक्य का वह भाग ज्ञात करें जिसमें कोई त्रुटि है। यदि कोई त्रुटि नहीं है, तो 'कोई त्रुटि नहीं है' चुनें।

स्कूल का सभी विद्यार्थी (1)\ इस मैदान में (2)\ प्रार्थना के लिए आते है (3)\ कोई त्रुटि नहीं है (4)

- Ans
- 1. 1
 - 2. 4
 - 3. 2
 - 4. 3

Question ID : 65497832885
Status : Not Answered
Chosen Option : --

Q.5 मधुर बात करनेवाला - वाक्यांश के लिए एक शब्द लिखिए-

- Ans
- 1. मधुर भाषी
 - 2. अल्पभाषी
 - 3. संगीतज्ञ
 - 4. सुखद

Question ID : 65497832899
Status : Not Answered
Chosen Option : --

Q.6 दिए गए वाक्य में रेखांकित खंड को प्रतिस्थापित करने के लिए सबसे उपयुक्त विकल्प का चयन करें। यदि इसे प्रतिस्थापित करने की आवश्यकता नहीं है, तो विकल्प 'किसी बदलाव की आवश्यकता नहीं है' का चयन करें।

आपसे मेरा सविनयपूर्वक निवेदन है।

- Ans
- 1. किसी बदलाव की आवश्यकता नहीं है।
 - 2. सविनय निवेदन है
 - 3. विनम्रपूर्वक निवेदन है
 - 4. समग्रपूर्वक अनुरोध है

Question ID : 65497832895
Status : Not Answered
Chosen Option : --

Q.7 रिक्त स्थान की पूर्ति के लिए सबसे उपयुक्त विकल्प का चयन करें।

शेखर अज्ञेय के एक उपन्यास का _____ है।

- Ans
- 1. अभिनेता
 - 2. नेता
 - 3. नायक
 - 4. सूत्रधार

Question ID : 65497832904
Status : Not Answered
Chosen Option : --

Q.8 दिए गए शब्द का विलोम चुनें।

प्रत्यक्ष

- Ans
- 1. परोक्ष
 - 2. अभिमुख
 - 3. सम्मुख
 - 4. समीप

Question ID : 65497832891
Status : Not Answered
Chosen Option : --

Q.9 उसका पास कुछ भी नहीं है।

रेखांकित शब्द की अशुद्धि पहचानिए-

- Ans
- 1. विभक्ति के कारण
 - 2. सर्वनाम के कारण
 - 3. कोई भी गलती नहीं है।
 - 4. संज्ञा के कारण

Question ID : 65497832900
Status : Not Answered
Chosen Option : --

Q.10 दिए गए शब्द का समानार्थी शब्द बताइए-

कपड़ा

- Ans
- 1. वज़न
 - 2. वमन
 - 3. वसन
 - 4. वपन

Question ID : 65497832886
Status : Not Answered
Chosen Option : --

Q.11 उस विकल्प का चयन करें जो निम्न मुहावरे का सही अर्थ व्यक्त करता है।

भगीरथ श्रम करना

- Ans
- 1. अथक प्रयत्न करना
 - 2. दृढ़ प्रतीज्ञा करना
 - 3. असम्भव कार्य करना
 - 4. कठिन श्रम करना

Question ID : 65497832892
Status : Not Answered
Chosen Option : --

Q.12 राह दिखानेवाला - वाक्यांश के लिए एक शब्द लिखिए।

- Ans
- 1. राही
 - 2. पथदर्शक
 - 3. मुसाफिर
 - 4. पथिक

Question ID : 65497832902
Status : Not Answered
Chosen Option : --

Q.13 उत्थान - रेखांकित शब्द का विलोम बताइए-

- Ans
- 1. आदर्श
 - 2. प्रगति
 - 3. पतन
 - 4. विकर्षण

Question ID : 65497832901
Status : Not Answered
Chosen Option : --

Q.14 'रास्ता देखना' मुहावरे का सही अर्थ है-

- Ans 1. मूल्यांकन करना
 2. प्रतीक्षा करना
 3. निराश होना
 4. परेशान होना

Question ID : 65497832903
Status : Not Answered
Chosen Option : --

Q.15 सही वर्तनी वाले शब्द का चयन करें।

- Ans 1. आत्मोत्सग
 2. आत्मोत्सर्ग
 3. आत्मोतसर्ग
 4. आत्मौत्सर्ग

Question ID : 65497832889
Status : Not Answered
Chosen Option : --

Q.16 दिये गये वाक्य के किस भाग में त्रुटि है?

मैं उसकी बुद्धिमानता से बहुत प्रभावित हूँ।

- Ans 1. प्रभावित हूँ।
 2. मैं उसकी
 3. बुद्धिमानता
 4. से बहुत

Question ID : 65497832897
Status : Not Answered
Chosen Option : --

Q.17 रिक्त स्थान की पूर्ति के लिए सबसे उपयुक्त शब्द का चयन करें।

मेरा और आपका _____ सम्बन्ध है।

- Ans 1. पक्का
 2. गहन
 3. घोर
 4. घनिष्ठ

Question ID : 65497832893
Status : Not Answered
Chosen Option : --

Q.18 दिए गये वाक्यांश के लिए एक शब्द दीजिये-

जो बहुत बोलता हो

- Ans 1. वाचाल
2. बहुभाषी
3. मितभाषी
4. अल्पभाषी

Question ID : 65497832887
Status : Not Answered
Chosen Option : --

Q.19 सही वर्तनी वाले शब्द का चयन करें।

- Ans 1. एकाग्रचित
2. एकाग्रचित
3. एकाग्रचित
4. एकाग्रचित

Question ID : 65497832888
Status : Not Answered
Chosen Option : --

Q.20 रिक्त स्थान की पूर्ति के लिए सबसे उपयुक्त शब्द का चयन करें-

उसका हृदय बड़ा _____ था।

- Ans 1. कठोर
2. कठिन
3. कर्कश
4. कसैला

Question ID : 65497832890
Status : Not Answered
Chosen Option : --

Comprehension:

गद्यांश को पढ़कर पूछे गये प्रश्नों के उत्तर लिखिए-

भारत के इतिहास में अमरत्व प्राप्ति के अधिकारी लौह-पुरुष सरदार वल्लभभाई पटेल को कौन नहीं जानता? 31 अक्टूबर, 1875 में गुजरात के नाडियाद गाँव में एक किसान परिवार में उनका जन्म हुआ था। पाठशाला का अभ्यास करने में काफी समय लगा था। 36 साल की उम्र में वकालत पढ़ने के लिए वे इंग्लैंड गए। उन्होंने 36 महीने का कोर्स 30 महीनों में पूरा किया। 1917 में वे गांधीजी के संपर्क में आए। ब्रिटिश राज्य के खिलाफ अहिंसक आंदोलन के जरिये बारदोली, बलसाड, खेड़ा आदि के किसानों को एकत्र किया। उनके इस आंदोलन ने उन्हें प्रसिद्धि एवं प्रतिष्ठा दिलाई। भारतीय राष्ट्रीय कांग्रेस ने प्रमुख स्थान दिया। लोगों ने उन्हें सरदार की उपाधि दी। आजादी के बाद छोटी-छोटी रियायतों को एक करने का कार्य किया। 15 अगस्त, 1947 तक हैदराबाद, कश्मीर और जूनागढ़ को छोड़कर सभी रियायतें भारत संघ में सम्मिलित हो गई थीं। गृहमंत्री बनने के बाद लगभग छः सौ रियायतों को भारत संघ में सम्मिलित किया। हैदराबाद के नवाब ने विरोध किया तो वहाँ सेना भेजकर निजाम को आत्मसमर्पण करने के लिए मजबूर किया। 15 दिसम्बर, 1950 को जगमगता वह सितारा हमें अंधकार में छोड़कर चला गया। सन् 1991 में उन्हें भारतरत्न से सम्मानित किया गया। स्वतंत्रता सेनानी सरदार वल्लभभाई की जीवनी सदैव प्रेरणादायी है।

SubQuestion No : 21

Q.21 _____ को लौहपुरुष कहा जाता है।

- Ans 1. लाला लजपतराय
 2. सरदार वल्लभभाई पटेल
 3. मोरारजी देसाई
 4. अटल बिहारी वाजपेयी

Question ID : 65497832906

Status : Not Answered

Chosen Option : --

Comprehension:

गद्यांश को पढ़कर पूछे गये प्रश्नों के उत्तर लिखिए-

भारत के इतिहास में अमरत्व प्राप्ति के अधिकारी लौह-पुरुष सरदार वल्लभभाई पटेल को कौन नहीं जानता? 31 अक्टूबर, 1875 में गुजरात के नाडियाद गाँव में एक किसान परिवार में उनका जन्म हुआ था। पाठशाला का अभ्यास करने में काफी समय लगा था। 36 साल की उम्र में वकालत पढ़ने के लिए वे इंग्लैंड गए। उन्होंने 36 महीने का कोर्स 30 महीनों में पूरा किया। 1917 में वे गांधीजी के संपर्क में आए। ब्रिटिश राज्य के खिलाफ अहिंसक आंदोलन के जरिये बारदोली, बलसाड, खेड़ा आदि के किसानों को एकत्र किया। उनके इस आंदोलन ने उन्हें प्रसिद्धि एवं प्रतिष्ठा दिलाई। भारतीय राष्ट्रीय कांग्रेस ने प्रमुख स्थान दिया। लोगों ने उन्हें सरदार की उपाधि दी। आजादी के बाद छोटी-छोटी रियायतों को एक करने का कार्य किया। 15 अगस्त, 1947 तक हैदराबाद, कश्मीर और जूनागढ़ को छोड़कर सभी रियायतें भारत संघ में सम्मिलित हो गई थीं। गृहमंत्री बनने के बाद लगभग छः सौ रियायतों को भारत संघ में सम्मिलित किया। हैदराबाद के नवाब ने विरोध किया तो वहाँ सेना भेजकर निजाम को आत्मसमर्पण करने के लिए मजबूर किया। 15 दिसम्बर, 1950 को जगमगता वह सितारा हमें अंधकार में छोड़कर चला गया। सन् 1991 में उन्हें भारतरत्न से सम्मानित किया गया। स्वतंत्रता सेनानी सरदार वल्लभभाई की जीवनी सदैव प्रेरणादायी है।

SubQuestion No : 22

Q.22 वकालत शब्द को व्याकरणिक दृष्टि से पहचानिए-

- Ans 1. विशेषण
 2. व्यक्तिवाचक संज्ञा
 3. जातिवाचक संज्ञा
 4. भाववाचक संज्ञा

Question ID : 65497832907

Status : Not Answered

Chosen Option : --

Comprehension:

गद्यांश को पढ़कर पूछे गये प्रश्नों के उत्तर लिखिए-

भारत के इतिहास में अमरत्व प्राप्ति के अधिकारी लौह-पुरुष सरदार वल्लभभाई पटेल को कौन नहीं जानता? 31 अक्टूबर, 1875 में गुजरात के नाडियाद गाँव में एक किसान परिवार में उनका जन्म हुआ था। पाठशाला का अभ्यास करने में काफी समय लगा था। 36 साल की उम्र में वकालत पढ़ने के लिए वे इंग्लैंड गए। उन्होंने 36 महीने का कोर्स 30 महीनों में पूरा किया। 1917 में वे गांधीजी के संपर्क में आए। ब्रिटिश राज्य के खिलाफ अहिंसक आंदोलन के जरिये बारदोली, बलसाड, खेड़ा आदि के किसानों को एकत्र किया। उनके इस आंदोलन ने उन्हें प्रसिद्धि एवं प्रतिष्ठा दिलाई। भारतीय राष्ट्रीय कांग्रेस ने प्रमुख स्थान दिया। लोगों ने उन्हें सरदार की उपाधि दी। आजादी के बाद छोटी-छोटी रियायतों को एक करने का कार्य किया। 15 अगस्त, 1947 तक हैदराबाद, कश्मीर और जूनागढ़ को छोड़कर सभी रियायतें भारत संघ में सम्मिलित हो गई थीं। गृहमंत्री बनने के बाद लगभग छः सौ रियायतों को भारत संघ में सम्मिलित किया। हैदराबाद के नवाब ने विरोध किया तो वहाँ सेना भेजकर निजाम को आत्मसमर्पण करने के लिए मजबूर किया। 15 दिसम्बर, 1950 को जगमगता वह सितारा हमें अंधकार में छोड़कर चला गया। सन् 1991 में उन्हें भारतरत्न से सम्मानित किया गया। स्वतंत्रता सेनानी सरदार वल्लभभाई की जीवनी सदैव प्रेरणादायी है।

SubQuestion No : 23

Q.23 आजादी के बाद उन्होंने कौन-सा पद संभाला?

- Ans
- 1. प्रधानमंत्री का
 - 2. राष्ट्रपति का
 - 3. गृहमंत्री का
 - 4. संरक्षण मंत्री का

Question ID : 65497832908

Status : Not Answered

Chosen Option : --

Comprehension:

गद्यांश को पढ़कर पूछे गये प्रश्नों के उत्तर लिखिए-

भारत के इतिहास में अमरत्व प्राप्ति के अधिकारी लौह-पुरुष सरदार वल्लभभाई पटेल को कौन नहीं जानता? 31 अक्टूबर, 1875 में गुजरात के नाडियाद गाँव में एक किसान परिवार में उनका जन्म हुआ था। पाठशाला का अभ्यास करने में काफी समय लगा था। 36 साल की उम्र में वकालत पढ़ने के लिए वे इंग्लैंड गए। उन्होंने 36 महीने का कोर्स 30 महीनों में पूरा किया। 1917 में वे गांधीजी के संपर्क में आए। ब्रिटिश राज्य के खिलाफ अहिंसक आंदोलन के जरिये बारदोली, बलसाड, खेड़ा आदि के किसानों को एकत्र किया। उनके इस आंदोलन ने उन्हें प्रसिद्धि एवं प्रतिष्ठा दिलाई। भारतीय राष्ट्रीय कांग्रेस ने प्रमुख स्थान दिया। लोगों ने उन्हें सरदार की उपाधि दी। आजादी के बाद छोटी-छोटी रियायतों को एक करने का कार्य किया। 15 अगस्त, 1947 तक हैदराबाद, कश्मीर और जूनागढ़ को छोड़कर सभी रियायतें भारत संघ में सम्मिलित हो गई थीं। गृहमंत्री बनने के बाद लगभग छः सौ रियायतों को भारत संघ में सम्मिलित किया। हैदराबाद के नवाब ने विरोध किया तो वहाँ सेना भेजकर निजाम को आत्मसमर्पण करने के लिए मजबूर किया। 15 दिसम्बर, 1950 को जगमगता वह सितारा हमें अंधकार में छोड़कर चला गया। सन् 1991 में उन्हें भारतरत्न से सम्मानित किया गया। स्वतंत्रता सेनानी सरदार वल्लभभाई की जीवनी सदैव प्रेरणादायी है।

SubQuestion No : 24

Q.24 उनका जन्म _____ हुआ था।

- Ans
- 1. मुस्लिम परिवार में
 - 2. ब्राह्मण परिवार में
 - 3. पारसी परिवार में
 - 4. किसान परिवार में

Question ID : 65497832909

Status : Not Answered

Chosen Option : --

Comprehension:

गद्यांश को पढ़कर पूछे गये प्रश्नों के उत्तर लिखिए-

भारत के इतिहास में अमरत्व प्राप्ति के अधिकारी लौह-पुरुष सरदार वल्लभभाई पटेल को कौन नहीं जानता? 31 अक्टूबर, 1875 में गुजरात के नाडियाद गाँव में एक किसान परिवार में उनका जन्म हुआ था। पाठशाला का अभ्यास करने में काफी समय लगा था। 36 साल की उम्र में वकालत पढ़ने के लिए वे इंग्लैंड गए। उन्होंने 36 महीने का कोर्स 30 महीनों में पूरा किया। 1917 में वे गांधीजी के संपर्क में आए। ब्रिटिश राज्य के खिलाफ अहिंसक आंदोलन के जरिये बारदोली, बलसाड, खेड़ा आदि के किसानों को एकत्र किया। उनके इस आंदोलन ने उन्हें प्रसिद्धि एवं प्रतिष्ठा दिलाई। भारतीय राष्ट्रीय कांग्रेस ने प्रमुख स्थान दिया। लोगों ने उन्हें सरदार की उपाधि दी। आजादी के बाद छोटी-छोटी रियायतों को एक करने का कार्य किया। 15 अगस्त, 1947 तक हैदराबाद, कश्मीर और जूनागढ़ को छोड़कर सभी रियायतें भारत संघ में सम्मिलित हो गई थीं। गृहमंत्री बनने के बाद लगभग छः सौ रियायतों को भारत संघ में सम्मिलित किया। हैदराबाद के नवाब ने विरोध किया तो वहाँ सेना भेजकर निजाम को आत्मसमर्पण करने के लिए मजबूर किया। 15 दिसम्बर, 1950 को जगमगता वह सितारा हमें अंधकार में छोड़कर चला गया। सन् 1991 में उन्हें भारतरत्न से सम्मानित किया गया। स्वतंत्रता सेनानी सरदार वल्लभभाई की जीवनी सदैव प्रेरणादायी है।

SubQuestion No : 25

Q.25 उनकी मृत्यु _____ को हुई।

Ans 1. 15 दिसम्बर, 1950

2. 31 दिसम्बर, 1950

3. 25 दिसम्बर, 1950

4. 15 अक्टूबर, 1875

Question ID : 65497832910

Status : Not Answered

Chosen Option : --