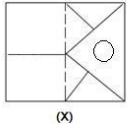


Constable (GD) in CAPFs, NIA, SSF and Rifleman (GD) in Assam Rifles Examination, 2018

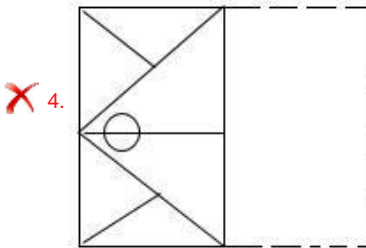
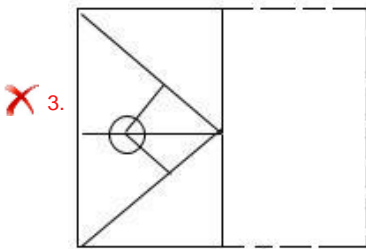
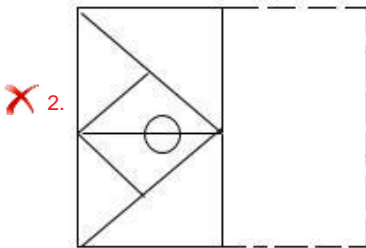
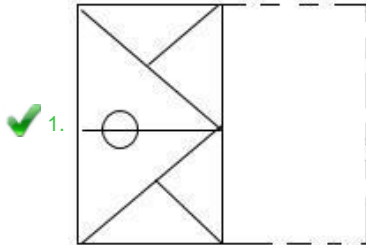
Roll No. :	
Registration No.	
Name :	
Exam Venue :	GATE institute
Exam Time :	9:00 AM - 10:30 AM
Exam Date :	19/02/2019

Section : General Section

Q.1 How would the pattern given on the square transparent sheet marked 'X' look when the sheet is folded along the dotted line?



Ans



Question ID : 9895803873

Chosen Option : 3

Q.2 Four words have been given out of which three are alike in some manner, while one is different. Choose the odd one

- Ans ✗ 1. Joy
 ✗ 2. Fear

3. Anger

4. Calm

Question ID : 9895803852
Chosen Option : 2

Q.3 The statements below are followed by two conclusions labeled I and II. Assuming that the information in the statements is true, even if it appears to be at variance with generally established facts, decide which conclusion(s) logically and definitely follow(s) from the information given in the statements.

Statements:

1. Some flowers are white.
2. Some white objects are round.

Conclusions:

- I. Some flowers are round.
- II. Every round object is either white or a flower.

- Ans**
1. Only conclusion II follows
 2. Both conclusions I and II follow
 3. Only conclusion I follows
 4. Neither conclusion I nor II follows

Question ID : 9895803861
Chosen Option : 4

Q.4 If in a code language, HEAD = 4158 and PASTE = 52019116, then TRICK = ?

- Ans**
1. 11391820
 2. 31191820
 3. 11391718
 4. 11932018

Question ID : 9895803857
Chosen Option : 2

Q.5 DAWN is related to DUSK in the same way as INAUGURATION is related to:

- Ans**
1. MEETING
 2. VALEDICTION
 3. CONCLUSION
 4. INVITATION

Question ID : 9895803853
Chosen Option : 4

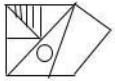
Q.6 Six houses A, B, C, D, E and F are located in two rows facing each other with three houses in each row. F is opposite C, which is to the left of E. D is to the right of A. Which house is facing B?

- Ans**
1. D
 2. A
 3. C
 4. E

Question ID : 9895803859
Chosen Option : 3

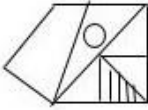
Q.7

Select the correct mirror image of the following figure when the mirror is placed to its right.

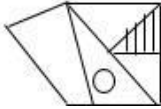


Ans

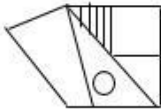
1.



2.



3.



4.



Question ID : 9895803871
Chosen Option : 1

Q.8 Select the correct option that will fill in the blank and complete the series.

2, 3, 4, 8, 16, 25, 52, _____

Ans 1. 114

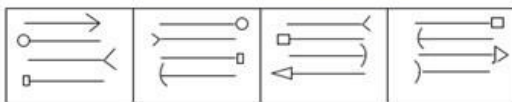
2. 85

3. 68

4. 79

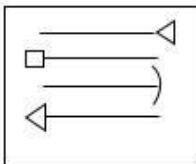
Question ID : 9895803863
Chosen Option : 1

Q.9 Choose the figure from the options that would follow next in the given series.

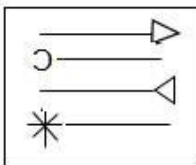


Ans

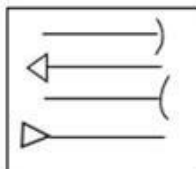
1.



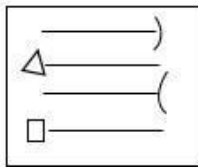
2.



3.



X 4.



Question ID : 9895803869
Chosen Option : 1

Q.1 Select the option that is related to the third term in the same way as the second term is related to the first term.

0 BDFH : AFCL :: FHJL : ?

- Ans
- X 1. EIGP
 - X 2. EJFO
 - X 3. HFGN
 - ✓ 4. EJGP

Question ID : 9895803855
Chosen Option : 2

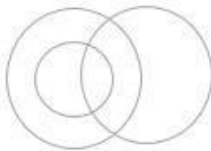
Q.1 Which of the following Venn diagrams correctly represents the relationships among the classes:

1

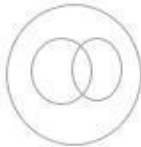
Educated, Mothers, Employed

Ans

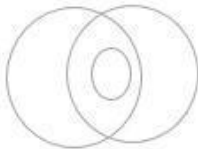
X 1.



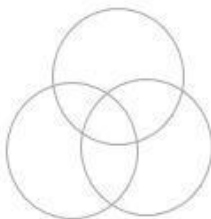
X 2.



X 3.



✓ 4.



Question ID : 9895803874
Chosen Option : 2

Q.1 Four numbers have been given out of which three are alike in some manner, while one is different. Choose the odd one.

2

- Ans
- X 1. 84
 - X 2. 91
 - X 3. 42
 - ✓ 4. 55

Question ID : 9895803866
Chosen Option : 3

Q.1 If in a code language SYMPHONY is coded as ZOPIQNZT, then THURSDAY would be coded as:
3

- Ans
- 1. UIVSTEBZ
 - 2. ZBETSIVU
 - 3. XZCRQTGS
 - 4. ZBETSVIU

Question ID : 9895803856
Chosen Option : 1

Q.1 Select the correct option that will fill in the blank and complete the series.
4

2, 5, 7, 12, ?, 31, 50

- Ans
- 1. 18
 - 2. 19
 - 3. 25
 - 4. 21

Question ID : 9895803864
Chosen Option : 3

Q.1 The statements below are followed by two conclusions labeled I and II. Assuming that the information in the statements
5 is true, even if it appears to be at variance with generally established facts, decide which conclusion(s) logically and definitely follow(s) from the information given in the statements.

Statements:

- 1. Some mangoes are fruits.
- 2. All fruits are sweet.

Conclusions:

- I. Some sweet objects are mangoes.
- II. All sweet objects are fruits.
- III. Some mangoes are neither fruits nor sweet.

- Ans
- 1. Only conclusions I and III follow
 - 2. Only conclusions II and III follow
 - 3. Only conclusions I and II follow
 - 4. Only conclusion I follows

Question ID : 9895803862
Chosen Option : 4

Q.1 Select the option that is related to the third term in the same way as the second term is related to the first term.
6
Torture : Cruelty :: Forgiveness : ?

- Ans
- 1. Politeness
 - 2. Generosity
 - 3. Gratitude
 - 4. Excuse

Question ID : 9895803854
Chosen Option : 1

Q.1
7

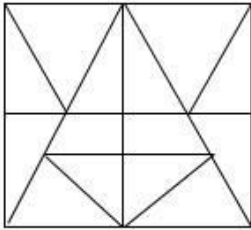
Choose the figure from the options in which the figure marked 'X' is embedded.



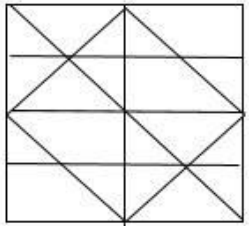
(X)

Ans

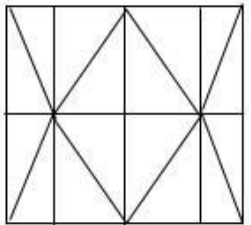
1.



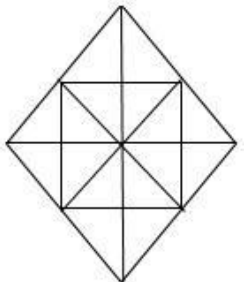
2.



3.



4.



Question ID : 9895803872
Chosen Option : 3

Q.1 Pick the odd pair out.

Ans 1. 14-41

2. 17-52

3. 23-32

4. 12-21

Question ID : 9895803865
Chosen Option : 1

Q.1 V, X, Y and Z are playing cards. X is to the left of Y and V is to the right of Z. If X is facing West, which direction is V facing?

Ans 1. North

2. South

3. West

4. East

Q.2
0 Which two signs should be interchanged to make the following equation correct?

$$12 + 16 \div 8 \times 4 - 8 = 24$$

- Ans
- 1. + and ×
 - 2. × and −
 - 3. ÷ and ×
 - 4. − and ÷

Q.2
1 Which one of the following four-letter clusters does NOT belong to the group?

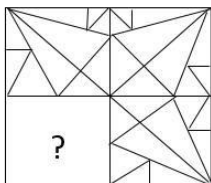
- Ans
- 1. CXWD
 - 2. FUSG
 - 3. DWTG
 - 4. BYWD

Q.2
2 Select the correct option that will fill in the blank and complete the series.

cab, gef, ljk, rpq, _____

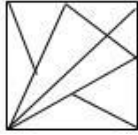
- Ans
- 1. ywx
 - 2. yxw
 - 3. zxy
 - 4. wvu

Q.2
3 Select the figure which when placed in the blank space of the figure marked 'X' would complete the pattern.



- Ans
- 1.
 - 2.
 - 3.

4.



Question ID : 9895803870
Chosen Option : 1

Q.2 Among six objects P, Q, R, S, T and U, Q is heavier than R but lighter than T. S is lighter than T but heavier than U. P is lighter than Q but heavier than S. Which is the second heaviest object?

- Ans
- 1. Q
 - 2. T
 - 3. P
 - 4. S

Question ID : 9895803860
Chosen Option : 2

Q.2 The numbers in the following set are related in a certain way. Choose the set that is similar to the following set:
5 {6, 10, 8}

- Ans
- 1. {8, 12, 9}
 - 2. {5, 13, 12}
 - 3. {13, 17, 16}
 - 4. {3, 6, 4}

Question ID : 9895803867
Chosen Option : 4

Q.2 The famous playback singer _____ is a recipient of the Bharat Ratna Award.
6

- Ans
- 1. Shubha Mudgal
 - 2. Asha Bhonsale
 - 3. Shreya Ghoshal
 - 4. Lata Mangeshkar

Question ID : 9895805415
Chosen Option : 4

Q.2 Which day is celebrated as the World Environment Day?
7

- Ans
- 1. 5th June
 - 2. 1st December
 - 3. 5th August
 - 4. 1st May

Question ID : 9895805426
Chosen Option : 1

Q.2 Who is an 'indentured labourer'?
8

- Ans
- 1. A slave from Africa
 - 2. A labour bought in a market

3. An unpaid labourer

4.

A bonded labourer, working to pay off his passage to a new country

Question ID : 9895805432
Chosen Option : 2

Q.2
9 _____ is known as the Eastern Mountain Range.

Ans 1. Patkai Range

2. Aravalli

3. Karakoram

4. Shivalik

Question ID : 9895805429
Chosen Option : 2

Q.3
0 What do banks utilize a major portion of the deposits for?

Ans 1. Loans

2. Guarantee

3. Interest

4. Collaterals

Question ID : 9895805417
Chosen Option : 1

Q.3
1 In the context of Indian National Movement, who was known as 'Frontier Gandhi'?

Ans 1. Maghfoor Ahmad Ajazi

2. Khan Abdul Gaffar Khan

3. Udham Singh

4. Ashfaqulla Khan

Question ID : 9895805431
Chosen Option : 1

Q.3
2 What is diluted acetic acid commonly known as?

Ans 1. Oleum

2. Blue vitriol

3. Vinegar

4. Alum

Question ID : 9895805424
Chosen Option : 1

Q.3
3 The slogan "Workers of the world unite" was associated to:

Ans 1. French revolution

2. American revolution

3.

4. Japanese revolution

Question ID : 9895805433
Chosen Option : 1

Q.3
4 The ICC Emerging Player of the Year 2018 was awarded to _____.

- Ans
- 1. Hardik Pandya
 - 2. K.L. Rahul
 - 3. Rishabh Pant
 - 4. Shikhar Dhawan

Question ID : 9895805412
Chosen Option : 4

Q.3
5 The first amendment to the Indian Constitution was made in _____.

- Ans
- 1. 1947
 - 2. 1948
 - 3. 1951
 - 4. 1950

Question ID : 9895805421
Chosen Option : 3

Q.3
6 Which type of micro-organism causes typhoid?

- Ans
- 1. Virus
 - 2. Bacteria
 - 3. Fungi
 - 4. Protozoa

Question ID : 9895805427
Chosen Option : 2

Q.3
7 The Constitution of India contains _____ schedules.

- Ans
- 1. 11
 - 2. 12
 - 3. 14
 - 4. 13

Question ID : 9895805420
Chosen Option : 2

Q.3
8 When a force resists the relative motion between two surfaces, it is called _____.

- Ans
- 1. Resistance
 - 2. Convection
 - 3. Friction
 - 4. Induction

Question ID : 9895805423
Chosen Option : 1

Q.3
9 What is the movement of a plant due to the stimulus of light known as?

- Ans
1. Respiration
 2. Geotaxis
 3. Geotropism
 4. Phototropism

Question ID : 9895805425
Chosen Option : 1

Q.4
0 Malgudi Days was written by _____.

- Ans
1. Shashi Tharoor
 2. Vikram Seth
 3. Amish Tripathi
 4. R. K. Narayan

Question ID : 9895805416
Chosen Option : 4

Q.4
1 Who won the National Squash 2018 Womens Singles title?

- Ans
1. Dipika Pallikal
 2. Bhuvaneshkumari
 3. Urwashi Joshi
 4. Joshna Chinappa

Question ID : 9895805413
Chosen Option : 3

Q.4
2 River Yamuna does NOT pass through which of the following states?

- Ans
1. Uttarakhand
 2. Haryana
 3. Gujarat
 4. Uttar Pradesh

Question ID : 9895805430
Chosen Option : 1

Q.4
3 What is an annual statement of receipts and expenditure of the government over a fiscal year is known as?

- Ans
1. Capital
 2. Revenue
 3. Tax
 4. Budget

Question ID : 9895805418
Chosen Option : 4

Q.4

4

- Ans
- 1. Assam – Kathakali
 - 2. Tamil Nadu – Odissi
 - 3. Uttar Pradesh – Kathak
 - 4. Punjab – Mohiniyattam

Question ID : 9895805409
Chosen Option : 1

Q.4
5 Which one of the following is a labour intensive industry?

- Ans
- 1. Pulses
 - 2. Tea
 - 3. Maize
 - 4. Wheat

Question ID : 9895805428
Chosen Option : 1

Q.4
6 Under which of the following situations, the Fundamental Right to Freedom is curtailed in India?

- Ans
- 1. Financial Emergency
 - 2. Epidemic Emergency
 - 3. State Emergency
 - 4. National Emergency

Question ID : 9895805422
Chosen Option : 4

Q.4
7 Nalanda was an ancient centre of learning for which religion?

- Ans
- 1. Islam
 - 2. Christianity
 - 3. Jainism
 - 4. Buddhism

Question ID : 9895805411
Chosen Option : 4

Q.4
8 Which of the following statement is NOT correct in the context of rising importance of tertiary sector in India?

- Ans
- 1. Growth of information and technology
 - 2. Growth in per capita income
 - 3. Growth of service providing industries
 - 4. Growth of political awareness in rural areas

Question ID : 9895805419
Chosen Option : 4

Q.4
9 Ustad Amjad Ali Khan is famous for playing the _____.

- Ans
- 1.

- 2. violin
- 3. veena
- 4. sarod

Question ID : 9895805410
Chosen Option : 2

Q.5
0 RK Laxman is famous for _____.

- Ans
- 1. wall painting
 - 2. classical music
 - 3. films
 - 4. cartoons

Question ID : 9895805414
Chosen Option : 3

Q.5
1 When a person goes to his office from his house with a speed of 10 km/hr, he is late by 20 minutes. When he goes with speed of 15 km/hr, he is late by 5 minutes. What is the distance (in km) between his office and house?

- Ans
- 1. 8
 - 2. 7.5
 - 3. 7
 - 4. 8.5

Question ID : 9895805734
Chosen Option : 2

Q.5
2 The value of:

$$\left[\frac{5}{7} \text{ of } 1\frac{3}{8} - \frac{5}{8} \text{ of } \frac{6}{7} \right] \div \left[1 - \frac{1}{7} \times \left(\frac{5}{12} + \frac{1}{3} \right) \right] \times \frac{\frac{1}{7} - \frac{1}{9}}{\frac{1}{7} + \frac{1}{9}}$$

- Ans
- 1. $\frac{1}{4}$
 - 2. 8
 - 3. 4
 - 4. $\frac{1}{16}$

Question ID : 9895805716
Chosen Option : 2

Q.5
3 What is the sum of digits of the least number which when divided by 21, 28, 30 and 35 leaves the same remainder 10 in each case but is divisible by 17?

- Ans
- 1. 11
 - 2. 13
 - 3. 14
 - 4. 10

Question ID : 9895805715
Chosen Option : 3

Q.5 A park is in the shape of a rectangle. Its length and breadth 240 m and 100 m, respectively. At the centre of the park, there is a circular lawn. The area of the park, excluding the lawn is 3904 m^2 . What is the perimeter (in m) of the lawn?
(use $\pi = 3.14$)

- Ans 1. 502.4
 2. 516.2
 3. 508.6
 4. 512.8

Question ID : 9895805730
Chosen Option : 2

Q.5 The value of :

$$1.25 - [1 \div \{3 + (2 - 0.4 \times 2.5)\}]$$

- Ans 1. 2
 2. 1
 3. 0
 4. $\frac{1}{2}$

Question ID : 9895805717
Chosen Option : 4

Q.5 The profit on selling 35 mangoes is equal to the cost price of 7 mangoes. What is the profit percentage?

- Ans 1. $33\frac{1}{3}$
 2. 20
 3. 25
 4. $16\frac{2}{3}$

Question ID : 9895805721
Chosen Option : 2

Q.5 A train takes 3 hours less time for a journey of 360 km, if its speed is increased by 10 km/hr from its usual speed. What is its increased speed (in km/hr)?

- Ans 1. 40
 2. 42
 3. 36
 4. 30

Question ID : 9895805733
Chosen Option : 3

Q.5 After allowing a discount of $12\frac{1}{2}\%$ on the marked price of an article, it was sold for ₹700. Had the discount NOT been given, the profit would have been 60%. The cost price of the article is:

- Ans 1. ₹500
 2. ₹540
 3. ₹600
 4. ₹480

Question ID : 9895805720

Chosen Option : 4

Q.5 If $(x + 4)$, $(x + 12)$, $(x - 1)$, and $(x + 5)$ are in proportion then the mean proportional between x and $(x - 7)$ is:

- Ans
- 1. 9
 - 2. 16
 - 3. 15
 - 4. 12

Question ID : 9895805725

Chosen Option : 3

Q.6 Three positive number are given. If the average of any two of them is added to the third number, the sums obtained are 172, 216 and 180. What is the average of the given three numbers?

- Ans
- 1. 93
 - 2. $95\frac{1}{3}$
 - 3. $94\frac{2}{3}$
 - 4. 96

Question ID : 9895805719

Chosen Option : 1

Q.6 The selling price of an article is 84% of its cost price. If the cost price is increased by 20% and the selling price is increased by 25%, what is the percentage increase/decrease in the loss with respect to the earlier loss?

- Ans
- 1. $6\frac{1}{4}$ %, decrease
 - 2. $6\frac{2}{3}$ %, decrease
 - 3. $6\frac{1}{4}$ %, increase
 - 4. $6\frac{2}{3}$ %, increase

Question ID : 9895805722

Chosen Option : 3

Q.6 2 men and 7 women can do a piece of work in 14 days whereas 3 men and 8 women can do it in 11 days. In how many days 5 men and 4 women can do the same work?

- Ans
- 1. 11
 - 2. 12
 - 3. 14
 - 4. 10

Question ID : 9895805735

Chosen Option : 1

Q.6 A metallic sphere of radius 4 cm is melted and the cast into small spherical balls, each of diameter 0.4 cm. The number of small balls will be:

- Ans
- 1. 1000
 - 2. 8000
 - 3. 4000
 - 4. 2000

Question ID : 9895805732
Chosen Option : 4

Q.6 A sum of ₹14460 is divided among A, B, C and D such that the ratio of share of A and B is 3 : 5, that of B and C is 6 : 7 and that of C and D is 14 : 15. What is the difference between the shares of A and C?

- Ans
- 1. ₹1440
 - 2. ₹1500
 - 3. ₹2100
 - 4. ₹2040

Question ID : 9895805726
Chosen Option : 2

Q.6 A pipe can fill a tank in 10 minutes while another pipe can empty it in 12 minutes. If the pipes are opened alternately each for 1 minute, beginning with the first pipe, the tank will be full after (in minutes):

- Ans
- 1. 90
 - 2. 109
 - 3. 108
 - 4. 120

Question ID : 9895805736
Chosen Option : 4

Q.6 Renu saves 30% of her income. If her savings increases by 30% and the expenditure increases by 25%, then the percentage increase in her income is:

- Ans
- 1. 30
 - 2. 25.8
 - 3. 26.5
 - 4. 15

Question ID : 9895805723
Chosen Option : 3

Q.6 Study the following table and answer questions:

7 Number of employees working in five different companies.

Company	No of Employees	Ratio of Males & Females
A	380	13 : 6
B	420	4 : 3
C	360	8 : 7
D	320	11 : 9
E	280	3 : 5

The ratio of the number of male employees in company C to the number of female employees in the company D is:

- Ans
- 1. 3 : 2
 - 2. 5 : 2
 - 3. 4 : 3
 - 4. 8 : 9

Question ID : 9895805737
Chosen Option : 4

Q.6 The compound interest on a sum of ₹15625 for $2\frac{3}{4}$ years at 16% per annum, The interest compound annually is :

- Ans
- 1. ₹6661

2. ₹5400

3. ₹7932

4. ₹7923

Question ID : 9895805728

Chosen Option : 3

Q.6 A and B are two cones. The curved surface area of A is twice that of B. The slant height of B is twice that of A. What is the ratio of radii of A to B?

Ans 1. 3 : 2

2. 1 : 4

3. 4 : 1

4. 2 : 1

Question ID : 9895805731

Chosen Option : 2

Q.7 Study the following table and answer questions:

0

Number of employees working in five different companies.

Company	No of Employees	Ratio of Males & Females
A	380	13 : 6
B	420	4 : 3
C	360	8 : 7
D	320	11 : 9
E	280	3 : 5

The number of female employees in company C is what percent more than the number of male employees in company E?

Ans 1. 55

2. 60

3. 48

4. 54

Question ID : 9895805739

Chosen Option : 3

Q.7 Two numbers are in the ratio 3 : 5. If 9 is subtracted from each, the numbers so obtained are in the ratio 12 : 23. If 3 is added to the smaller number and 7 is subtracted from the other number, they will be in the ratio:

Ans 1. 5 : 6

2. 4 : 5

3. 3 : 4

4. 5 : 8

Question ID : 9895805724

Chosen Option : 1

Q.7

2

Study the following table and answer questions:

Number of employees working in five different companies.

Company	No of Employees	Ratio of Males & Females
A	380	13 : 6
B	420	4 : 3
C	360	8 : 7
D	320	11 : 9
E	280	3 : 5

What percent of total male employees in companies A and B is the number of female employees in E?

- Ans
- 1. 35
 - 2. 36
 - 3. 30
 - 4. 32

Question ID : 9895805738
Chosen Option : 4

Q.7 What is the mean of the range, median and mode of the data given below?

3
1, 2, 5, 9, 6, 3, 9, 7, 4, 3, 9, 1, 9, 6, 8, 1

- Ans
- 1. $7\frac{1}{2}$
 - 2. 8
 - 3. $8\frac{1}{2}$
 - 4. 7

Question ID : 9895805729
Chosen Option : 4

Q.7 The simple interest on a certain sum at 14% per annum for $3\frac{1}{4}$ years is ₹3731. What will the amount of the same sum for $5\frac{1}{2}$ years at half the earlier rate?

- 4
Ans
- 1. ₹11931
 - 2. ₹11913
 - 3. ₹11537
 - 4. ₹11357

Question ID : 9895805727
Chosen Option : 2

Q.7 The average height of a certain number of persons in a group is 155.5 cm. Later on 4 persons of height 154.6 cm, 158.4 cm, 152.2 cm and 153.8 cm leave the group. As a result the average height of the remaining persons increases by 0.15 cm. What was the number of persons initially in the group?

- 5
Ans
- 1. 18
 - 2. 20
 - 3. 22
 - 4. 24

Question ID : 9895805718
Chosen Option : 1

Q.1 From the given options, identify the segment in the sentence which contains the grammatical error.

Had you told me that you were in Mumbai I could have certainly contacted you instead of waiting here.

- Ans 1. you were
 2. Had you
 3. could have
 4. instead of

Question ID : 9895805256
Chosen Option : 4

Q.2 Select the correctly spelt word.

- Ans 1. Contemporary
 2. Contemporary
 3. Comtemporary
 4. Contempory

Question ID : 9895805278
Chosen Option : 3

Q.3 Select the word which means the same as the group of words given.

One who loves mankind

- Ans 1. Humanist
 2. Philologist
 3. Philanthropist
 4. Philosopher

Question ID : 9895805277
Chosen Option : 4

Q.4 Select the synonym of the given word.

ABILITY

- Ans 1. Disposition
 2. Outlook
 3. Instinct
 4. Capacity

Question ID : 9895805270
Chosen Option : 2

Q.5 Select the antonym of the given word.

VIRTUOUS

- Ans 1. Worthy
 2. Honest
 3.

✓ 4. Vicious

Question ID : 9895805273
Chosen Option : 1

Comprehension:

In the following passage some words have been deleted. Fill in the blanks with the help of the alternatives given.

Fundamentally, all human beings possess a combination of fixed inherited traits. All individuals possess the (1) _____ highly developed nervous system, backbones, erect posture, hair, etc. Therefore, (2) _____ among human beings arise only in (3) _____ changes of this basic pattern. Racial differences (4) _____ one of the finest distinctions and are based only on (5) _____ slight differences.

SubQuestion No : 6

Q.6 Select the most appropriate option that will fill in the blank number 1.

- Ans
- 1. natural
 - 2. large
 - 3. same
 - 4. different

Question ID : 9895805265
Chosen Option : 1

Comprehension:

In the following passage some words have been deleted. Fill in the blanks with the help of the alternatives given.

Fundamentally, all human beings possess a combination of fixed inherited traits. All individuals possess the (1) _____ highly developed nervous system, backbones, erect posture, hair, etc. Therefore, (2) _____ among human beings arise only in (3) _____ changes of this basic pattern. Racial differences (4) _____ one of the finest distinctions and are based only on (5) _____ slight differences.

SubQuestion No : 7

Q.7 Select the most appropriate option that will fill in the blank number 2.

- Ans
- 1. similarities
 - 2. naturalness
 - 3. sameness
 - 4. variations

Question ID : 9895805266
Chosen Option : 1

Comprehension:

In the following passage some words have been deleted. Fill in the blanks with the help of the alternatives given.

Fundamentally, all human beings possess a combination of fixed inherited traits. All individuals possess the (1) _____ highly developed nervous system, backbones, erect posture, hair, etc. Therefore, (2) _____ among human beings arise only in (3) _____ changes of this basic pattern. Racial differences (4) _____ one of the finest distinctions and are based only on (5) _____ slight differences.

SubQuestion No : 8

Q.8 Select the most appropriate option that will fill in the blank number 3.

- Ans 1. minor
 2. complete
 3. large
 4. fundamental

Question ID : 9895805267
Chosen Option : 1

Comprehension:

In the following passage some words have been deleted. Fill in the blanks with the help of the alternatives given.

Fundamentally, all human beings possess a combination of fixed inherited traits. All individuals possess the (1) _____ highly developed nervous system, backbones, erect posture, hair, etc. Therefore, (2) _____ among human beings arise only in (3) _____ changes of this basic pattern. Racial differences (4) _____ one of the finest distinctions and are based only on (5) _____ slight differences.

SubQuestion No : 9

Q.9 Select the most appropriate option that will fill in the blank number 4.

- Ans 1. show
 2. represent
 3. give
 4. present

Question ID : 9895805268
Chosen Option : 1

Comprehension:

In the following passage some words have been deleted. Fill in the blanks with the help of the alternatives given.

Fundamentally, all human beings possess a combination of fixed inherited traits. All individuals possess the (1) _____ highly developed nervous system, backbones, erect posture, hair, etc. Therefore, (2) _____ among human beings arise only in (3) _____ changes of this basic pattern. Racial differences (4) _____ one of the finest distinctions and are based only on (5) _____ slight differences.

SubQuestion No : 10

Q.1

0 Select the most appropriate option that will fill in the blank number 5.

- Ans 1. hidden
 2. possible
 3. clear
 4. certain

Question ID : 9895805269
Chosen Option : 4

Q.1
1 Fill in the blank with the most appropriate option.

Devika is the most _____ of them all and has managed to do well in her profession.

- Ans 1. intelligent
 2. simple
 3. insolent
 4. audacious

Question ID : 9895805281
Chosen Option : 3

Q.1
2 Select the option that means the same as the given idiom.

Have several irons in the fire

- Ans 1. Doing iron related work
 2. Having too many engagements at a time
 3. Burning unwanted pieces of iron
 4. Talking to many persons simultaneously

Question ID : 9895805275
Chosen Option : 4

Q.1
3 Select the synonym of the given word.

CHARACTER

- Ans 1. Performance
 2. Spirit
 3. Mannerism
 4. Trait

Question ID : 9895805271
Chosen Option : 2

Q.1
4 Select the antonym of the given word.

TRANSPARENT

- Ans 1. White-coloured
 2. Translucent
 3. Milky

✓ 4. Opaque

Question ID : 9895805272
Chosen Option : 2

Q.1 5 Select the most appropriate option to substitute the underlined segment in the given sentence. If there is no need to substitute it, select No improvement.

The rules of chess require that one has to makes only one move at a time.

- Ans
- 1. made
 - 2. has to make
 - 3. will make
 - 4. No improvement

Question ID : 9895805261
Chosen Option : 4

Q.1 6 Select the word which means the same as the group of words given.

A person who is more than hundred years old

- Ans
- 1. Centurial
 - 2. Centuriator
 - 3. Centurion
 - 4. Centenarian

Question ID : 9895805276
Chosen Option : 2

Q.1 7 Select the correctly spelt word.

- Ans
- 1. Incorigible
 - 2. Incurrigible
 - 3. Incourrigible
 - 4. Incurrigibel

Question ID : 9895805279
Chosen Option : 1

Q.1 8 Select the most appropriate option to fill in the blank.

He has been _____ my birthday all week!

- Ans
- 1. celebrate
 - 2. celebrating
 - 3. celebrated
 - 4. celebrates

Question ID : 9895805263
Chosen Option : 3

Q.1 9

Fill in the blank with the most appropriate option.

Suresh is _____ in collecting stamps.

- Ans
- 1. habitual
 - 2. interested
 - 3. customary
 - 4. habituated

Question ID : 9895805280
Chosen Option : 3

Q.2 Select the most appropriate option to substitute the underlined segment in the given sentence. If there is no need to substitute it, select No improvement.

0

He decided to leave very quickly the hotel.

- Ans
- 1. leave the hotel quickly.
 - 2. leave quickly the hotel.
 - 3. quickly leave hotel.
 - 4. No improvement

Question ID : 9895805260
Chosen Option : 4

Q.2 From the given options, identify the segment in the sentence which contains the grammatical error.

1

If the report did not have the information needed it could not be used by them.

- Ans
- 1. be used by them
 - 2. it could not
 - 3. If the
 - 4. information needed

Question ID : 9895805258
Chosen Option : 2

Q.2 From the given options, identify the segment in the sentence which contains the grammatical error.

2

The errors for the typed reports were so numerous that they could hardly be overlooked.

- Ans
- 1. typed reports
 - 2. could hardly be
 - 3. so numerous
 - 4. errors for

Question ID : 9895805257
Chosen Option : 4

Q.2 Select the most appropriate option to fill in the blank.

3

_____ in Nagpur, we are unwilling to move to another city.

- Ans
- 1. Since we have lived
 - 2. Since we were living
 - 3. Being that we are living

4. Since we have been living

Question ID : 9895805262
Chosen Option : 3

Q.2
4 Select the option that means the same as the given idiom.

In high spirits

- Ans
- 1. Become successful
 - 2. Feel joyful
 - 3. Create confusion
 - 4. Remain calm

Question ID : 9895805274
Chosen Option : 1

Q.2
5 Select the most appropriate option to substitute the underlined segment in the given sentence. If there is no need to substitute it, select No improvement.

Though a hero, he acted a coward.

- Ans
- 1. like a coward
 - 2. cowardly
 - 3. No improvement
 - 4. as coward

Question ID : 9895805259
Chosen Option : 3

Section : Hindi Language

Q.1 दिए गए वाक्य का वह भाग ज्ञात करें जिसमें कोई त्रुटि है।

कविता सुनने पर श्रोताओं को तालियों द्वारा कवि का अभिनंदन करने का मौका मिल जाती है।

- Ans
- 1. कवि का अभिनंदन करने का
 - 2. मौका मिल जाती है।
 - 3. कविता सुनने पर
 - 4. श्रोताओं को तालियों द्वारा

Question ID : 9895805564
Chosen Option : --

Q.2 दिए गए शब्द का विलोम चुनें।

शाश्वत

- Ans
- 1. अनादि
 - 2. चिरंतन
 - 3. नश्वर
 - 4. अनंत

Q.3 सही वर्तनी वाले शब्द का चयन करें।

- Ans
1. बाढ़पीड़ित
 2. बाढ़पिडित
 3. बाढ़पिडित
 4. बाढ़पीडीत

Q.4 दिए गए शब्द के पर्यायवाची शब्द का चयन करें।

गृह

- Ans
1. गगन
 2. वसन
 3. कुटीर
 4. निकेतन

Comprehension:

निम्नलिखित गद्यांश के रिक्त स्थानों की पूर्ति गद्यांश के नीचे दिए गए प्रश्नों के अनुसार कीजिए -

विश्व के लगभग सभी धर्म ग्रन्थों ने अहिंसा पालन पर बल दिया है। अहिंसा का सामान्य अर्थ है किसी भी _____ (1) को न मारना। परन्तु अहिंसा का अभिप्राय केवल शारीरिक हिंसा न करने तक ही सीमित नहीं है। मन से, वचन से तथा कर्म से किसी प्राणी को _____ (2) न पहुँचाना ही अहिंसा है। यदि हम किसी को _____ (3) नहीं दे सकते तो हमें किसी का जीवन लेने का अधिकार भी नहीं है। अहिंसा पालक व्यक्ति के संपर्क में आने वाले व्यक्ति भी सब प्रकार के ईर्ष्या-द्वेष आदि से _____ (4) हो जाते हैं। अहिंसा हमें _____ (5) नहीं बनाती अपितु शक्तिशाली बनाती है।

SubQuestion No : 5

Q.5 गद्यांश में संकेतित रिक्त स्थान (1) के लिए उपयुक्त शब्द होगा -

- Ans
1. पेड़
 2. प्राणी

3. पुरुष

4. स्त्री

Question ID : 9895805573
Chosen Option : --

Comprehension:

निम्नलिखित गद्यांश के रिक्त स्थानों की पूर्ति गद्यांश के नीचे दिए गए प्रश्नों के अनुसार कीजिए -

विश्व के लगभग सभी धर्म ग्रन्थों ने अहिंसा पालन पर बल दिया है। अहिंसा का सामान्य अर्थ है किसी भी _____ (1) को न मारना। परन्तु अहिंसा का अभिप्राय केवल शारीरिक हिंसा न करने तक ही सीमित नहीं है। मन से, वचन से तथा कर्म से किसी प्राणी को _____ (2) न पहुँचाना ही अहिंसा है। यदि हम किसी को _____ (3) नहीं दे सकते तो हमें किसी का जीवन लेने का अधिकार भी नहीं है। अहिंसा पालक व्यक्ति के संपर्क में आने वाले व्यक्ति भी सब प्रकार के ईर्ष्या-द्वेष आदि से _____ (4) हो जाते हैं। अहिंसा हमें _____ (5) नहीं बनाती अपितु शक्तिशाली बनाती है।

SubQuestion No : 6

Q.6 गद्यांश में संकेतित रिक्त स्थान (2) के लिए उपयुक्त शब्द होगा -

- Ans 1. प्रसन्नता
 2. हँसाना
 3. रुलाना
 4. कष्ट

Question ID : 9895805574
Chosen Option : --

Comprehension:

निम्नलिखित गद्यांश के रिक्त स्थानों की पूर्ति गद्यांश के नीचे दिए गए प्रश्नों के अनुसार कीजिए -

विश्व के लगभग सभी धर्म ग्रन्थों ने अहिंसा पालन पर बल दिया है। अहिंसा का सामान्य अर्थ है किसी भी _____ (1) को न मारना। परन्तु अहिंसा का अभिप्राय केवल शारीरिक हिंसा न करने तक ही सीमित नहीं है। मन से, वचन से तथा कर्म से किसी प्राणी को _____ (2) न पहुँचाना ही अहिंसा है। यदि हम किसी को _____ (3) नहीं दे सकते तो हमें किसी का जीवन लेने का अधिकार भी नहीं है। अहिंसा पालक व्यक्ति के संपर्क में आने वाले व्यक्ति भी सब प्रकार के ईर्ष्या-द्वेष आदि से _____ (4) हो जाते हैं। अहिंसा हमें _____ (5) नहीं बनाती अपितु शक्तिशाली बनाती है।

SubQuestion No : 7

Q.7 गद्यांश में संकेतित रिक्त स्थान (3) के लिए उपयुक्त शब्द होगा -

- Ans
1. हिंसा
 2. मकान
 3. दुःख
 4. जीवन

Question ID : 9895805575
Chosen Option : --

Comprehension:

निम्नलिखित गद्यांश के रिक्त स्थानों की पूर्ति गद्यांश के नीचे दिए गए प्रश्नों के अनुसार कीजिए -

विश्व के लगभग सभी धर्म ग्रन्थों ने अहिंसा पालन पर बल दिया है। अहिंसा का सामान्य अर्थ है किसी भी _____ (1) को न मारना। परन्तु अहिंसा का अभिप्राय केवल शारीरिक हिंसा न करने तक ही सीमित नहीं है। मन से, वचन से तथा कर्म से किसी प्राणी को _____ (2) न पहुँचाना ही अहिंसा है। यदि हम किसी को _____ (3) नहीं दे सकते तो हमें किसी का जीवन लेने का अधिकार भी नहीं है। अहिंसा पालक व्यक्ति के संपर्क में आने वाले व्यक्ति भी सब प्रकार के ईर्ष्या-द्वेष आदि से _____ (4) हो जाते हैं। अहिंसा हमें _____ (5) नहीं बनाती अपितु शक्तिशाली बनाती है।

SubQuestion No : 8

Q.8 गद्यांश में संकेतित रिक्त स्थान (4) के लिए उपयुक्त शब्द होगा -

- Ans
1. मुक्त
 2. युक्त
 3. ग्रस्त
 4. अधीन

Question ID : 9895805576
Chosen Option : --

Comprehension:

निम्नलिखित गद्यांश के रिक्त स्थानों की पूर्ति गद्यांश के नीचे दिए गए प्रश्नों के अनुसार कीजिए -

विश्व के लगभग सभी धर्म ग्रन्थों ने अहिंसा पालन पर बल दिया है। अहिंसा का सामान्य अर्थ है किसी भी _____ (1) को न मारना। परन्तु अहिंसा का अभिप्राय केवल शारीरिक हिंसा न करने तक ही सीमित नहीं है। मन से, वचन से तथा कर्म से किसी प्राणी को _____ (2) न पहुँचाना ही अहिंसा है। यदि हम किसी को _____ (3) नहीं दे सकते तो हमें किसी का जीवन लेने का अधिकार भी नहीं है। अहिंसा पालक व्यक्ति के संपर्क में आने वाले व्यक्ति भी सब प्रकार के ईर्ष्या-द्वेष आदि से _____ (4) हो जाते हैं। अहिंसा हमें _____ (5) नहीं बनाती अपितु शक्तिशाली बनाती है।

SubQuestion No : 9

Q.9 गद्यांश में संकेतित रिक्त स्थान (5) के लिए उपयुक्त शब्द होगा -

- Ans
1. दोषी
 2. सपूत
 3. कायर
 4. शक्तिशाली

Question ID : 9895805577
Chosen Option : --

Q.1 दिए गए वाक्य का वह भाग ज्ञात करें जिसमें कोई त्रुटि है।

जिसके पास चरित्र होता है उसके सामने संसार भर का संपत्तियाँ घटने टेक देती हैं।

- Ans
1. जिसके पास चरित्र होता है
 2. घुटने टेक देती हैं।
 3. उसके सामने

4. संसार भर का संपत्तियाँ

Question ID : 9895805563
Chosen Option : --

Q.1
1 दिये गये वाक्यांश के लिए एक शब्द दीजिये।

जो बिना वेतन के कार्य करे

Ans

- ✓ 1. सामूहिक
2. अवैतनिक
3. संवैतनिक
4. आधुनिक

Question ID : 9895805584
Chosen Option : --

Q.1
2 रिक्त स्थान को भरने के लिए उपयुक्त शब्द का चयन करें।

देश को _____ से बचना चाहिए।

Ans

1. हरिश्चन्द्रों
2. जयचन्द्रों
3. अतिथियों
4. सज्जनों

Question ID : 9895805569
Chosen Option : --

Q.1
3 दिए गए शब्द का विलोम चुनें।

आयात

Ans

- ✓ 1. बयान
2. निर्यात
3. अर्थ
✗ 4. आयत

Question ID : 9895805579
Chosen Option : --

Q.1
4 दिए गए शब्द के पर्यायवाची शब्द का चयन करें।

वैर

Ans

1. विद्रोह
✗ 2. झगड़ा
3. विद्वेष
✗ 4. लड़ाई

Question ID : 9895805581
Chosen Option : --

Q.1
5 दिये गये वाक्यांश के लिए एक शब्द दीजिये।

जो सप्ताह में एक बार होता हो

Ans

1. साप्ताहिक
2. पाक्षिक
3. मासिक
4. वार्षिक

Question ID : 9895805585
Chosen Option : --

Q.1
6 दिए गए वाक्य में रेखांकित खंड को प्रतिस्थापित करने के लिए उपयुक्त विकल्प का चयन करें।

किसी की टोपी घर में छूट गई और किसी की चश्मा गिर गई।

Ans

1. किसी के चश्मे गिर गया।
2. किसी का चश्मा गिर गए।
3. किसी का चश्मा गिर गई।
4. किसी का चश्मा गिर गया।

Question ID : 9895805566
Chosen Option : --

Q.1
7 रिक्त स्थान को भरने के लिए उपयुक्त शब्द का चयन करें।

भारतीय सैनिकों ने युद्ध में _____ का परिचय दिया।

Ans

1. खटास
2. वीरता
3. मिठास
4. कायरता

Question ID : 9895805568
Chosen Option : --

Q.1
8 दिए गए वाक्य में रेखांकित खंड को प्रतिस्थापित करने के लिए उपयुक्त विकल्प का चयन करें।

जो परिश्रम से मुँह मोड़ता है, तब जीवन में पिछड़ जाता है।

Ans

1. वह जीवन में
2. वे जीवन में
3. अब जीवन में
4. सब जीवन में

Question ID : 9895805565
Chosen Option : --

Q.1 निम्नलिखित में से उस विकल्प का चयन करें जो 'दाल गलना' मुहावरे का अर्थ व्यक्त करता है।

Ans

1. युक्ति असफल होना
2. युक्ति बनाना
3. युक्ति सफल होना
4. नुकसान होना

Question ID : 9895805583
Chosen Option : --

Q.2 रिक्त स्थान को भरने के लिए उपयुक्त शब्द का चयन करें।

स्वयंसेवकों का _____ प्रधानमंत्री से मिलने गया।

Ans

1. भीड़
2. टुकड़ी
3. बल
4. दल

Question ID : 9895805570
Chosen Option : --

Q.2 सही वर्तनी वाले शब्द का चयन करें।

Ans

1. प्रेमातुर
2. परेमातुर
3. प्रेमतुर
4. प्रेमातूर

Question ID : 9895805587
Chosen Option : --

Q.2 दिए गए वाक्य में रेखांकित खंड को प्रतिस्थापित करने के लिए उपयुक्त विकल्प का चयन करें।

न्याय व्यवस्था कहती है कि जिसने अपराध किया है उसने दंड तो मिलेगा ही।

Ans

1. उससे दंड तो मिलेगा ही।
2. उसमें दंड तो मिलेगा ही।
3. उसे दंड तो मिलेगा ही।
4. उसी से दंड तो मिलेगा ही।

Question ID : 9895805567
Chosen Option : --

Q.2 निम्नलिखित में से उस विकल्प का चयन करें जो 'गाँठ बाँधना' मुहावरे का अर्थ व्यक्त करता है।

Ans

1. अच्छी तरह याद रखना

✗ 2. भूल जाना

3. गाँठ दिखने पर स्मरण होना

4. गाँठ में पैसे बाँधना

Question ID : 9895805582
Chosen Option : --

Q.2
4 रिक्त स्थान को भरने के लिए उपयुक्त शब्द का चयन करें।

हमें अपने _____ होने पर गर्व है।

Ans

1. चोर

2. भिखारी

3. भारतीय

4. भारती

Question ID : 9895805571
Chosen Option : --

Q.2
5 दिए गए वाक्य का वह भाग ज्ञात करें जिसमें कोई त्रुटि है।

आदर्श विद्यार्थी के गुण सादा जीवन उच्च विचार होता है।

Ans

✗ 1. के गुण

2. सादा जीवन उच्च विचार

3. आदर्श विद्यार्थी

4. होता है।

Question ID : 9895805562
Chosen Option : --

Constable (GD) in CAPFs, NIA, SSF and Rifleman (GD) in Assam Rifles Examination, 2018

Roll No. :	
Registration No.	
Name :	
Exam Venue :	iON Digital Zone iDZ Gram Raigawan Near Patan Bypass
Exam Time :	4:00 PM - 5:30 PM
Exam Date :	19/02/2019

Section : **General Section**

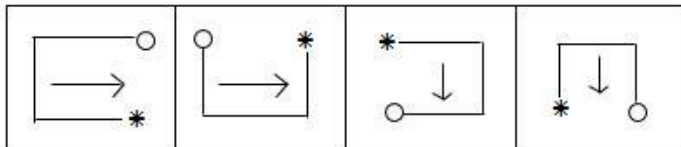
Q.1 Four numbers have been given out of which three are alike in some manner, while one is different. Choose the odd one.

- Ans ✔ 1. 1321
✘ 2. 729
✘ 3. 125
✘ 4. 343

Question ID : **9895803942**
Chosen Option : 1

Q.2

Choose the option that would follow next in the given figure series.



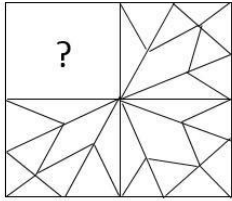
Ans

- ✘ 1.
- ✔ 2.
- ✘ 3.
- ✘ 4.

Question ID : **9895803945**
Chosen Option : 1

Q.3

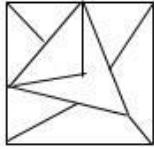
Select the figure which when placed in the blank space of the figure marked 'X' would complete the pattern.



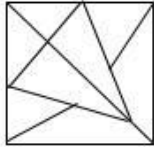
(X)

Ans

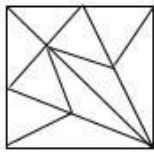
1.



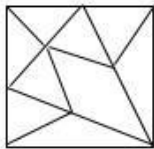
2.



3.



4.



Question ID : 9895803946
Chosen Option : 4

Q.4 Which number will follow next in the given number series?

15, 12, 19, 14, 25, 16, ?

Ans 1. 35

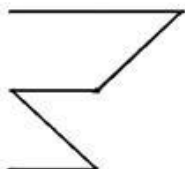
2. 33

3. 29

4. 31

Question ID : 9895803939
Chosen Option : 2

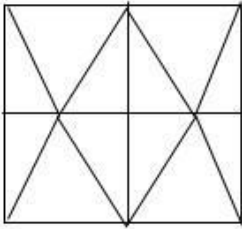
Q.5 Choose the option in which the figure marked 'X' is embedded.



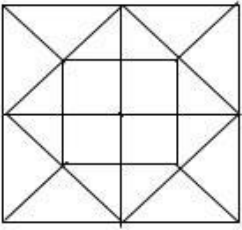
(X)

Ans

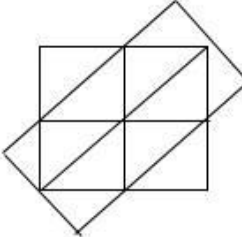
✗ 1.



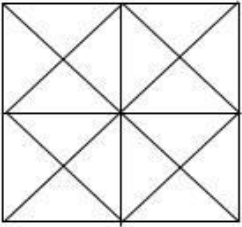
✗ 2.



✗ 3.



✓ 4.



Question ID : 9895803948
Chosen Option : 4

Q.6 Pick the odd one out.

- Ans
- ✗ 1. Tyre
 - ✓ 2. Plate
 - 3. Ring
 - 4. Bangle

Question ID : 9895803928
Chosen Option : 2

Q.7 AGENDA is related to MEETING in the same way as PROGRAMME is related to:

- Ans
- ✓ 1. FUNCTION
 - ✗ 2. SPEECH
 - ✗ 3. INAUGURATION
 - ✗ 4. ORGANISATION

Question ID : 9895803929
Chosen Option : 1

Q.8 Which one of the following four-letter clusters does NOT belong to the group?

- Ans
- ✗ 1. KQOM
 - ✗ 2. CIGE

3. PVTR
 4. WZXY

Question ID : 9895803927
Chosen Option : 4

Q.9 The statements below are followed by two conclusions labeled I and II. Assuming that the information in the statements is true, even if it appears to be at variance with generally established facts, decide which conclusion(s) logically and definitely follow(s) from the information given in the statements.

Statements:

1. All roads are streets.
2. Some streets are avenues.

Conclusions:

- I. Some roads are avenues.
- II. All avenues are roads.

- Ans** 1. Neither conclusion I nor II follows
 2. Both conclusions I and II follow
 3. Only conclusion II follows
 4. Only conclusion I follows

Question ID : 9895803937
Chosen Option : 3

Q.1 Select the option that is related to the third term in the same way as the second term is related to the first term.
0

Temple : Worship :: Court : ?

- Ans** 1. Lawyer
 2. Argument
 3. Judge
 4. Jurisdiction

Question ID : 9895803930
Chosen Option : 4

Q.1 Six girls are sitting in a row facing West. Kim is to the left of Sima and Sony is between Piku and Ria. There are two people seated between Piku and Sima, who is separated from Neela by one person. If Piku is seated at one end of the row, who is at the other end?
1

- Ans** 1. Neela
 2. Sima
 3. Ria
 4. Kim

Question ID : 9895803935
Chosen Option : 1

Q.1 The numbers in the following set are related in a certain way. Choose the set that is similar to the following set:
2

{128, 8, 32}

- Ans** 1. {144, 36, 72}

2. {196, 7, 14}
3. {64, 4, 16}
4. {122, 10, 30}

Question ID : 9895803943
Chosen Option : 3

Q.1 Select the correct option that will fill in the blank and complete the series.

3

dmt, fkv, ihy, mdc, ____

- Ans
1. rxi
 2. rzh
 3. qzl
 4. ryh

Question ID : 9895803926
Chosen Option : 2

Q.1 Select the option that is related to the third term in the same way as the second term is related to the first term.

4

BYWD : DWUF :: FUSH : ?

- Ans
1. HSQJ
 2. JQOL
 3. HSJQ
 4. HTRJ

Question ID : 9895803931
Chosen Option : 1

Q.1 R is taller than T. Both P and Q are taller than S, whose height is between P and T. If S is taller than T, who is the shortest?

5

- Ans
1. Q
 2. S
 3. P
 4. T

Question ID : 9895803936
Chosen Option : 4

Q.1 If in a code language ADVENTURES is coded as VDANEUTSER, then SYSTEMATIC would be coded as:

6

- Ans
1. YSTSMETACI
 2. SYSETAMCIT
 3. SYSMETITAC
 4. CITETAMSYS

Question ID : 9895803932
Chosen Option : 2

Q.1 Six persons A, B, C, D, E and F are sitting around a round table facing the centre. B is seated to the left of D. E is seated to the right of C. A is facing F, who is seated to the left of C. Who is seated to the left of A?

7

- Ans 1. E
 2. B
 3. C
 4. D

Question ID : 9895803934
Chosen Option : 2

Q.1 The statements below are followed by two conclusions labeled I and II. Assuming that the information in the statements is true, even if it appears to be at variance with generally established facts, decide which conclusion(s) logically and definitely follow(s) from the information given in the statements.

Statements:

1. Some animals are tigers.
2. All tigers are vertebrates.

Conclusions:

- I. All vertebrates are tigers.
- II. Some vertebrates are animals.

- Ans 1. Only conclusion II follows
 2. Neither conclusion I nor II follows
 3. Only conclusion I follows
 4. Both conclusion I & II follow

Question ID : 9895803938
Chosen Option : 4

Q.1 Select the correct option that will fill in the blank and complete the series.

5, ____, 10, 19, 35, 60

- Ans 1. 9
 2. 7
 3. 8
 4. 6

Question ID : 9895803940
Chosen Option : 4

Q.2 Which two signs should be interchanged to make the following equation correct?

$$6 \times 2 + 8 - 16 \div 4 = 18$$

- Ans 1. + and ÷
 2. + and ×
 3. - and ÷
 4. × and ÷

Question ID : 9895803944
Chosen Option : 2

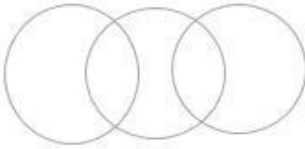
Q.2

1 Which of the following Venn diagrams correctly represents the relationships among the classes:

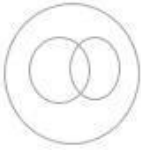
Products, Factory, Machines

Ans

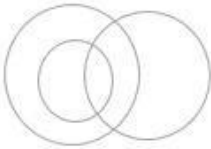
1.



2.



3.



4.



Question ID : 9895803950
Chosen Option : 4

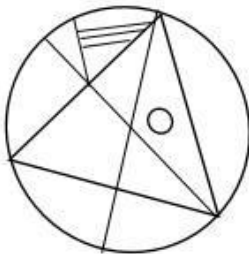
Q.2 Choose the alternative which most closely resembles the mirror image of the given word when mirror is placed at right side.

2 side.

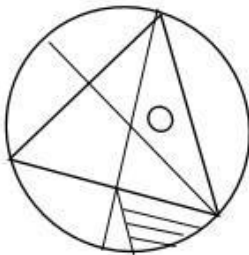


Ans

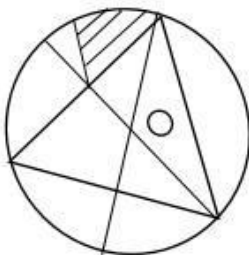
1.



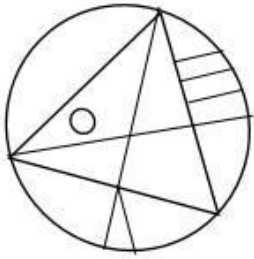
2.



3.

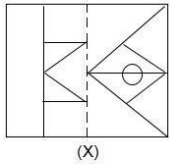


X 4.



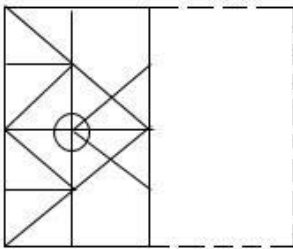
Question ID : 9895803947
Chosen Option : 3

Q.2 How would the pattern given on the square transparent sheet marked 'X' look when the sheet is folded along the dotted line?
3 line?

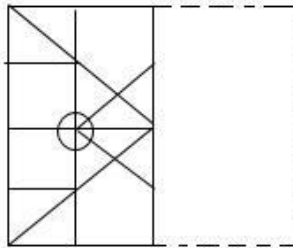


Ans

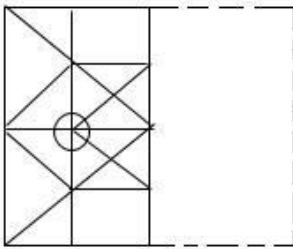
X 1.



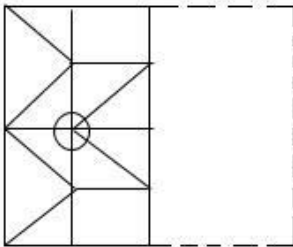
X 2.



✓ 3.



X 4.



Question ID : 9895803949
Chosen Option : 4

Q.2
4 Pick the odd pair out.

Ans X 1. 17-49





✓ 2. 15-41

X 3. 9-25

 4. 5-13





Question ID : 9895803941
Chosen Option : 3

Q.2
5 If in a code language BADE = 1254 and HATE= 18520, then HEALER = ?

- Ans
-  1. 18512158
 -  2. 58112158
 -  3. 58121185
 -  4. 15818512

Question ID : 9895803933
Chosen Option : 2

Q.2
6 India recognizes the Right to _____ as being part of Right to Life (Article 21).

- Ans
-  1. Water
 -  2. Medication
 -  3. Acceptance
 -  4. Fitness

Question ID : 9895805472
Chosen Option : 3

Q.2
7 Neutral, expansionary, and contractionary strategies are related to which policy of the government?

- Ans
- 1. Banking policy
 - 2. Fiscal policy
 - 3. Monetary policy
 - 4. Budgetary policy



Question ID : 9895805467
Chosen Option : 1

Q.2
8 During whose rule was the historical Nalanda University established?

- Ans
-  1. Bindusara
 - 2. Chandragupta
 -  3. Kumaragupta
 -  4. Dasratha

Question ID : 9895805481
Chosen Option : 1

Q.2
9 Which among the following is the smallest mountain range in the world?

- Ans
-  1. Ural
 -  2. Sierra Nevada
 - 3. Alps
 -  4. Sutter Buttes

Question ID : 9895805479

Q.3
0 'Hemis Festival' is celebrated in which Indian state?

- Ans
- 1. Karnataka
 - 2. Punjab
 - 3. Tamil Nadu
 - 4. Jammu and Kashmir

Question ID : 9895805460
Chosen Option : 4

Q.3
1 Which city among the following is the most densely populated city, as of 2018?

- Ans
- 1. Paris
 - 2. Shanghai
 - 3. Istanbul
 - 4. Tokyo

Question ID : 9895805480
Chosen Option : 4

Q.3
2 Who has won Sayed Modi India Grand Prix Gold Badminton Title 2018 in Men's Singles Titles?

- Ans
- 1. Srikanth Kidambi
 - 2. Prannoy Kumar
 - 3. Ajay Jayaram
 - 4. Sameer Verma

Question ID : 9895805463
Chosen Option : 1

Q.3
3 'Bishan Singh Bedi' is a legendary Indian player of:

- Ans
- 1. hockey
 - 2. cricket
 - 3. football
 - 4. lawn tennis

Question ID : 9895805462
Chosen Option : 1

Q.3
4 Aravind Adiga got the prestigious Man Booker Prize for which book?

- Ans
- 1. God of Small Things
 - 2. The White Tiger
 - 3. Selection Day
 - 4. The Kite Runner

Question ID : 9895805464
Chosen Option : 3

Q.3 Eminent economist and columnist _____ has resigned as part time member of Economic Advisory Council to the Prime Minister Narendra Modi.

- Ans
1. Raghuram Rajan
 2. Jagdish Bhagwati
 3. Arvind Subramanian
 4. Surjit Bhalla

Question ID : 9895805468
Chosen Option : 2

Q.3 Which Indian state has the largest area under forest cover?

- Ans
1. Kerala
 2. Chhattisgarh
 3. Madhya Pradesh
 4. Arunachal Pradesh

Question ID : 9895805476
Chosen Option : 3

Q.3 'Jhumur' a traditional dance form, is performed in which of the following states?

- Ans
1. Odisha
 2. Madhya Pradesh
 3. Assam
 4. Bengal

Question ID : 9895805459
Chosen Option : 1

Q.3 'The Mousetrap' was a famous play written by:

- Ans
1. George Bernard Shaw
 2. William Shakespeare
 3. Agatha Christie
 4. Caryl Churchill

Question ID : 9895805465
Chosen Option : 1

Q.3 The ancient cities of Harappa and Mohenjo-Daro emerged along the banks of which river?

- Ans
1. Brahmaputra River
 2. Baghmata River
 3. Ganga River
 4. Indus River

Question ID : 9895805482
Chosen Option : 4

Q.4 The famous 'Ratnagiri Monastery' is located in which Indian state?

- Ans 1. Orissa
 2. Jharkhand
 3. Karnataka
4. Gujarat

Question ID : 9895805461
Chosen Option : 4

Q.4 What was the event that fundamentally changed Sardar Vallabhbhai Patel's life and drove him towards politics?
1

- Ans 1. Meeting with Mahatma Gandhi in Godhra (year 1917)
2. Bardoli Satyagraha (year 1928)
3. The Gandhi Irwin Pact (year 1931)
4. Non-Cooperation Movement (year 1922)

Question ID : 9895805483
Chosen Option : 1

Q.4 In which year was the Right to Education Act enacted in India?
2

- Ans 1. 2009
 2. 2004
 3. 2011
 4. 2006

Question ID : 9895805471
Chosen Option : 2

Q.4 In which year did Ms. Sushmita Sen become the first Indian woman to win the 'Miss Universe' title?
3

- Ans 1. 1991
 2. 1994
 3. 1998
 4. 1996

Question ID : 9895805466
Chosen Option : 2

Q.4 Which of the following is regarded as the shortest river of India?
4

- Ans 1. Kaveri
 2. Arvari
 3. Godavari
 4. Narmada

Question ID : 9895805478
Chosen Option : 2

Q.4 Which of the following is a nocturnal animal?
5

- Ans 1. Porcupine
 2. Murids

3. Hamster

4. Bat

Question ID : 9895805475
Chosen Option : 4

Q.4
6 What is the SI unit for the measurement of pressure?

Ans 1. Newton

2. Pascal

3. Joule

4. Ampere

Question ID : 9895805473
Chosen Option : 2

Q.4
7 Which country among the following options has the shortest constitution in the world?

Ans 1. United Kingdom

2. Norway

3. United States of America

4. India

Question ID : 9895805470
Chosen Option : 2

Q.4
8 Who is the founder of 'Sulabh Sanitation and Social Reform Movement'?

Ans 1. Baba Amte

2. Medha Patkar

3. Aruna Roy

4. Dr Bindeshwar Pathak

Question ID : 9895805477
Chosen Option : 2

Q.4
9 Baking soda, the common cooking ingredient, has which of the following chemical name?

Ans 1. Sodium bicarbonate

2. Sodium chloride

3. Sodium benzoate

4. Monosodium glutamate

Question ID : 9895805474
Chosen Option : 1

Q.5
0 Union Cabinet has decide to raise contribution of Central Government to National Pension System (NPS) corpus of its employee from 10% to _____.

Ans 1. 20%

2. 14%

3. 12%

4.

Q.5 Study the following table, (which shows the number of units of an item manufactured and sold by 5 companies) and answer the question.

Company	No. of Units (in thousand)	
	Manufactured	Sold
A	42	30
B	45	32
C	36	26
D	51	36
E	54	40

Which Company sold the highest percentage of units as compared to manufactured by it?

- Ans 1. C
 2. B
 3. E
 4. A

Q.5 Walking at 75 % of his usual speed, Raghu is 80 minutes late to his office. What is his usual time in hours to cover the same distance?

- Ans 1. 5
 2. $4\frac{1}{2}$
 3. 4
 4. $3\frac{1}{2}$

Q.5 Let x be the least number which when divided by 10, 12, 14 and 16 leaves the remainders 2, 4, 6 and 8, respectively, but x is divisible by 17. When x is divided by 52, the quotient is:

- Ans 1. 99
 2. 95
 3. 92
 4. 96

Q.5 What is the average of the mean, median and range of the data:

34, 41, 6, 13, 27, 20, 48, and 55 ?

- Ans 1. $36\frac{1}{3}$
 2. $30\frac{1}{3}$
 3. $36\frac{2}{3}$
 4. $30\frac{1}{2}$

Q.5 Note-books are bought at 16 for ₹700 and sold at 11 for ₹500. How many notebooks should be sold to gain ₹450?
5

- Ans 1. 272
 2. 254
 3. 264
 4. 260

Question ID : 9895805769
Chosen Option : 2

Q.5 Working together A, B and C can complete a piece of work in 24 days. After working together for 4 days, C left the work. A and B completed the remaining work in 30 days. The number of days taken by C alone to complete the same work is:
6

- Ans 1. 72
 2. 90
 3. 54
 4. 60

Question ID : 9895805785
Chosen Option : 4

Q.5 The value of:
7

$$\frac{3}{8} \text{ of } \frac{4}{5} \div 1\frac{1}{5} + \frac{3}{7} \text{ of } \frac{7}{12} \div \frac{1}{40} \text{ of } \frac{2}{5} - 3\frac{2}{3} \div \frac{11}{30} \text{ of } \frac{2}{3}$$

- Ans 1. $3\frac{1}{3}$
 2. $10\frac{1}{4}$
 3. $2\frac{1}{2}$
 4. $2\frac{1}{4}$

Question ID : 9895805766
Chosen Option : 2

Q.5 Study the following table, (which shows the number of units of an item manufactured and sold by 5 companies) and answer the question.
8

Company	No. of Units (in thousand)	
	Manufactured	Sold
A	42	30
B	45	32
C	36	26
D	51	36
E	54	40

The ratio of the number of units manufactured by companies C and E together and the number of units sold by A and D together is?

- Ans 1. 17 : 15
 2. 15 : 11
 3. 24 : 13
 4. 15 : 13

Question ID : 9895805788
Chosen Option : 1

Q.5 Study the following table, (which shows the number of units of an item manufactured and sold by 5 companies) and answer the question.

Company	No. of Units (in thousand)	
	Manufactured	Sold
A	42	30
B	45	32
C	36	26
D	51	36
E	54	40

What percent of total number of units sold by companies A, B and D is equal to the number of units manufactured by company C? (correct to one decimal place)

- Ans
- 1. 40.9
 - 2. 35.6
 - 3. 36.7
 - 4. 33.3

Question ID : 9895805789
Chosen Option : 3

Q.6 A sum of ₹6900 was lent partly at 5% and the rest at 8% simple interest. Total interest received after 3 years from both was ₹1359. What was the ratio of money lent at 5% and 8%?

- Ans
- 1. 31 : 38
 - 2. 11 : 12
 - 3. 10 : 13
 - 4. 14 : 9

Question ID : 9895805777
Chosen Option : 4

Q.6 The compound interest on a sum of ₹15800 for 2 years at 9% per annum, when the interest is compound 8 monthly, is (nearest to a rupee):

- Ans
- 1. ₹2992
 - 2. ₹2956
 - 3. ₹3016
 - 4. ₹3018

Question ID : 9895805778
Chosen Option : 2

Q.6 If x is subtracted from each other of 17, 14, 22 and 18 then these numbers are in proportion, in this order. What is the mean proportion between $9x$ and $5x$?

- Ans
- 1. $6\sqrt{5}$
 - 2. 7
 - 3. $3\sqrt{5}$
 - 4. 6

Question ID : 9895805773
Chosen Option : 3

Q.6 A person bought 80 m cloth at ₹110 per m and sold 75% of it at a gain of 6%. At what gain percent did he sell the remaining cloth, if he gained 10% on his outlay?

- Ans
- 1. 28%
 - 2. 22%

3. 24 %

4. 26 %

Question ID : 9895805770

Chosen Option : 2

Q.6 Two trains start at the same time, P from A to B and Q from B to A. If they arrive at B and A, respectively, $2\frac{1}{2}$ hours and 10 hours after they passed each other, and the speed of P is 90 km/hr, then the speed of Q in km/hr is?

Ans 1. 80

2. 45

3. 75

4. 60

Question ID : 9895805783

Chosen Option : 3

Q.6 The average ages of boys and girls in a class is 14.5 years and 15 years respectively. If the ratio of the number of boys and girls is 2 : 3, then what is the average age (in years) of all students in the class?

Ans 1. 14.6

2. 15.4

3. 15.2

4. 14.8

Question ID : 9895805776

Chosen Option : 1

Q.6 Amina saves 16% of her income. Now her income is increased by 20% but she still saves the same amount as before. What is the percentage increase in her expenditure?

Ans 1. 23.8

2. 24.2

3. 20.4

4. 21.6

Question ID : 9895805771

Chosen Option : 3

Q.6 Two alloys A and B contain copper and zinc in the ratio 7 : 2 and 5 : 3 respectively. How many kg of A and B must be melted in order to get an alloy of 44 kg containing copper and zinc in the ratio 3 : 1?

Ans 1. 24 kg, 20 kg

2. 28 kg, 16 kg

3. 30 kg, 14 kg

4. 36 kg, 8 kg

Question ID : 9895805772

Chosen Option : 2

Q.6 The diagonal of a rectangle field is 15 m and its area is 108 m^2 . What is the cost of fencing the field at ₹50.50 per m?

Ans 1. ₹1919

2. ₹2020

3. ₹2222

4.

Question ID : 9895805780
Chosen Option : 2

Q.6 The value of $[9.5 \div (0.6 \times 0.75 + 0.8 \div 16) + 0.75] \div (0.03 \div 0.6 \text{ of } 0.01)$ lies between:

- Ans 1. 3 and 4
 2. 1 and 2
 3. 2 and 3
 4. 0 and 1

Question ID : 9895805767
Chosen Option : 3

Q.7 A shopkeeper marks the price of an article 25% above its cost price. After allowing 10% discount on the market price, the article is sold for ₹720. What is the difference (in ₹) between the cost price and market price of the article?

- Ans 1. 150
 2. 160
 3. 180
 4. 120

Question ID : 9895805768
Chosen Option : 2

Q.7 The volume of a right circular cone is 2464 cm^3 . If the radius of its base is 14 cm, then its curved surface area (in cm^2) is: (take $\pi = \frac{22}{7}$)

- Ans 1. $44\sqrt{85}$
 2. $44\sqrt{58}$
 3. $88\sqrt{58}$
 4. $88\sqrt{85}$

Question ID : 9895805782
Chosen Option : 2

Q.7 The average of 15 numbers is 56. The average of first 8 numbers is 54.4 and that of last 8 numbers is 56.6. If 8th number is excluded then what is the average of the remaining numbers? (correct to one decimal place)

- Ans 1. 53.8
 2. 56.2
 3. 53.6
 4. 56.6

Question ID : 9895805775
Chosen Option : 2

Q.7 A can do $\frac{3}{5}$ th of a work in 12 days, B can do $\frac{1}{3}$ rd of that work in 15 days. They worked together for 12 days and then A left the work, B alone will complete the remaining work in?

- Ans 1. 6 days
 2. 4 days
 3. 9 days
 4. 5 days

Question ID : 9895805786
Chosen Option : 3

Q.7 How many spherical balls each of 2cm radius can be made out of a solid metallic cube of edge 44 cm? (take $\pi = \frac{22}{7}$)
4

- Ans 1. 2541
 2. 2448
 3. 2420
 4. 2532

Question ID : 9895805781
Chosen Option : 3

Q.7 A sum of ₹ x is divided among A, B and C such that the ratio of shares of A and B is 3 : 4 and that of B and C is 5 : 6. If
5 C receives ₹1440 more than what A receives, then the value of x is?

- Ans 1. 9600
 2. 9440
 3. 9280
 4. 9000

Question ID : 9895805774
Chosen Option : 3

Section : English Language

Q.1 Select the most appropriate option to substitute the underlined segment in the given sentence. If there is no need to substitute it, select No improvement.

Dancing around a totem pole was one of the favourite pastimes of the American Indians.

- Ans 1. were one of the favourite pastimes
 2. No improvement
 3. was one of the favourite pastime
 4. are the favourite pastimes

Question ID : 9895805311
Chosen Option : --

Q.2 Select the synonym of the given word.

GALLANT

- Ans 1. Wild
 2. Courageous
 3. Violent
 4. Wealthy

Question ID : 9895805322
Chosen Option : --

Comprehension:

In the following passage some words have been deleted. Fill in the blanks with the help of the alternatives given.

After my job was over, I went to Mumbai and returned after (1) _____ six months. I had barely taken (2) _____ my clothes when I saw Ratan standing (3) _____ a new baby. He was (4) _____ with joy. Even my daughter could not have (5) _____ such joy on finding her younger brother after several years.

SubQuestion No : 3

Q.3 Select the most appropriate option that will fill in the blank number 1.

- Ans 1. hardly
 2. merely
 3. nearly
 4. rarely

Question ID : 9895805317
Chosen Option : --

Comprehension:

In the following passage some words have been deleted. Fill in the blanks with the help of the alternatives given.

After my job was over, I went to Mumbai and returned after (1) _____ six months. I had barely taken (2) _____ my clothes when I saw Ratan standing (3) _____ a new baby. He was (4) _____ with joy. Even my daughter could not have (5) _____ such joy on finding her younger brother after several years.

SubQuestion No : 4

Q.4 Select the most appropriate option that will fill in the blank number 2.

- Ans 1. away
 2. of
 3. over
 4. off

Question ID : 9895805318
Chosen Option : --

Comprehension:

In the following passage some words have been deleted. Fill in the blanks with the help of the alternatives given.

After my job was over, I went to Mumbai and returned after (1) _____ six months. I had barely taken (2) _____ my clothes when I saw Ratan standing (3) _____ a new baby. He was (4) _____ with joy. Even my daughter could not have (5) _____ such joy on finding her younger brother after several years.

SubQuestion No : 5

Q.5 Select the most appropriate option that will fill in the blank number 3.

Ans

1. along

2. near

3. by

4. with

Question ID : 9895805319
Chosen Option : --

Comprehension:

In the following passage some words have been deleted. Fill in the blanks with the help of the alternatives given.

After my job was over, I went to Mumbai and returned after (1) _____ six months. I had barely taken (2) _____ my clothes when I saw Ratan standing (3) _____ a new baby. He was (4) _____ with joy. Even my daughter could not have (5) _____ such joy on finding her younger brother after several years.

SubQuestion No : 6

Q.6 Select the most appropriate option that will fill in the blank number 4.

- Ans
1. dancing
 2. singing
 3. bursting
 4. skipping

Question ID : 9895805320
Chosen Option : --

Comprehension:

In the following passage some words have been deleted. Fill in the blanks with the help of the alternatives given.

After my job was over, I went to Mumbai and returned after (1) _____ six months. I had barely taken (2) _____ my clothes when I saw Ratan standing (3) _____ a new baby. He was (4) _____ with joy. Even my daughter could not have (5) _____ such joy on finding her younger brother after several years.

SubQuestion No : 7

Q.7 Select the most appropriate option that will fill in the blank number 5.

- Ans
1. thought
 2. understood
 3. felt
 4. advised

Question ID : 9895805321
Chosen Option : --

Q.8 Select the correctly spelt word.

- Ans
1. Throughfare

2. Thoroughfare

3. Thoroghfare

4. Thoroufare

Question ID : 9895805330

Chosen Option : --

Q.9 Select the word which means the same as the group of words given.

A city which is multicultural

Ans 1. Metro

2. Urban

3. Global

4. Cosmopolitan

Question ID : 9895805329

Chosen Option : --

Q.1 Select the most appropriate option to substitute the underlined segment in the given sentence. If there is no need to substitute it, select No improvement.

The GATT Treaty, it is explained, would allow subsidised to the extent of 10% of the market price.

Ans 1. would allow supply

2. would allow support

3. No improvement

4. would allow subsidy

Question ID : 9895805312

Chosen Option : --

Q.1
1 Select the antonym of the given word.

DUBIOUS

Ans 1. Doubtful

2. Docile

3. Faithful

4. Certain

Question ID : 9895805325

Chosen Option : --

Q.1
2 Select the antonym of the given word.

HOSTILE

Ans 1. Negative

2. Serene

3. Optimistic

4. Friendly

Question ID : 9895805324

Chosen Option : --

Q.1
3 Select the synonym of the given word.

IMPAIR

- Ans
- 1. Weaken
 - 2. Introduce
 - 3. Combine
 - 4. Improve

Question ID : 9895805323
Chosen Option : --

Q.1
4 Select the most appropriate option to substitute the underlined segment in the given sentence. If there is no need to substitute it, select No improvement.

Operation Flood was started with the primary objective for linking rural producers with urban consumers.

- Ans
- 1. No improvement
 - 2. was started with the primary objectives of
 - 3. was started with primary objective
 - 4. was started with the primary objective of

Question ID : 9895805313
Chosen Option : --

Q.1
5 From the given options, identify the segment in the sentence which contains the grammatical error.

Every one of the survivor of the capsized ship has told the same story.

- Ans
- 1. capsized ship
 - 2. of the survivor
 - 3. Every one
 - 4. the same story

Question ID : 9895805310
Chosen Option : --

Q.1
6 Select the option that means the same as the given idiom.

In the good books

- Ans
- 1. To accompany good people
 - 2. To be in favour of
 - 3. To do favourable things
 - 4. To collect good books

Question ID : 9895805326
Chosen Option : --

Q.1
7 Select the correctly spelt word.

- Ans
- 1. Equivelent
 - 2. Equivalent

3. Equivalent
4. Equivalant

Question ID : 9895805331
Chosen Option : --

Q.1
8 Select the option that means the same as the given idiom.

To sound a red alert.

- Ans
1. To raise an alarm
 2. To press a red button
 3. To hear an alarm
 4. To wave a red flag

Question ID : 9895805327
Chosen Option : --

Q.1
9 Select the most appropriate word to fill in the blank.

A successful entertainer _____ the right mood before beginning a joke or story.

- Ans
1. enjoys
 2. spreads
 3. creates
 4. engages

Question ID : 9895805333
Chosen Option : --

Q.2
0 From the given options, identify the segment in the sentence which contains the grammatical error:

The speech he made on his visit to our college concerning our society's needs have bothered me greatly.

- Ans
1. The speech
 2. have bothered
 3. concerning our
 4. on his visit

Question ID : 9895805309
Chosen Option : --

Q.2
1 Select the most appropriate option to fill in the blank.

If you listened carefully, you _____.

- Ans
1. understand
 2. would understand
 3. will understand
 4. would have understood

Question ID : 9895805314
Chosen Option : --

Q.2

2 From the given options, identify the segment in the sentence which contains the grammatical error.

He want to finish the assignment in the last week but in fact he could not.

- Ans
- 1. he could not
 - 2. want to finish
 - 3. in the last week
 - 4. the assignment

Question ID : 9895805308
Chosen Option : --

Q.2
3 Select the word which means the same as the group of words given.

One who knows everything

- Ans
- 1. Omnipotent
 - 2. Omnipotent
 - 3. Omniscient
 - 4. Omnipresent

Question ID : 9895805328
Chosen Option : --

Q.2
4 Select the most appropriate word to fill in the blank.

The soldiers were instructed to _____ restraint and handle the situation peacefully.

- Ans
- 1. control
 - 2. resist
 - 3. exercise
 - 4. prevent

Question ID : 9895805332
Chosen Option : --

Q.2
5 Select the most appropriate option to fill in the blank.

Invite everyone in the group to _____ us for a weekend party.

- Ans
- 1. join them
 - 2. join
 - 3. join together
 - 4. join each other

Question ID : 9895805315
Chosen Option : --

Section : Hindi Language

Q.1 दिए गए शब्द के पर्यायवाची शब्द का चयन करें।

रात्रि

- Ans
- 1. गजनी

- 2. ज़ानी
- 3. रजनी
- 4. हिमानी

Question ID : 9895805632
Chosen Option : 3

Q.2 दिए गए शब्द के पर्यायवाची शब्द का चयन करें।

सरस्वती

- Ans
- 1. नेत्री
 - 2. माता
 - 3. शारदा
 - 4. देवी

Question ID : 9895805633
Chosen Option : 1

Q.3 रिक्त स्थान को भरने के लिए उपयुक्त शब्द का चयन करें।

पढ़ लो _____ सो जाओ।

- Ans
- 1. लेकिन
 - 2. या
 - 3. बल्कि
 - 4. क्योंकि

Question ID : 9895805623
Chosen Option : 2

Q.4 रिक्त स्थान को भरने के लिए उपयुक्त शब्द का चयन करें।

स्वस्थ शरीर में स्वस्थ मन का _____ होता है।

- Ans
- 1. विकास
 - 2. निवास
 - 3. अभाव
 - 4. अंधकार

Question ID : 9895805620
Chosen Option : 3

Q.5 सही वर्तनी वाले शब्द का चयन करें।

- Ans
- 1. हस्तलिखित
 - 2. हसतलिखित
 - 3. हस्तलीखित
 - 4. हस्तलिखीत

Q.6 दिए गए वाक्य में रेखांकित खंड को प्रतिस्थापित करने के लिए उपयुक्त विकल्प का चयन करें।

मैंने इन सब बातों को गहराई पर अनुभव किया।

Ans

1. बातों में गहराई की
2. बातों पर गहराई की
3. बातों को गहराई से
4. गहराई पर बातों की

Q.7 दिये गये वाक्यांश के लिए एक शब्द दीजिये।

मेहनत करने वाला

Ans

1. आलसी
2. कामचोर
3. कर्मठ
4. मेहनताना

Q.8 दिए गए वाक्य में रेखांकित खंड को प्रतिस्थापित करने के लिए उपयुक्त विकल्प का चयन करें।

जीवन के इस पड़ाव पर आकर उसके व्यवहार में ठहराव आ गई है।

Ans

1. ठहराव जा कर गया है।
2. ठहराव आए गए हैं।
3. ठहराव आ गए है।
4. ठहराव आ गया है।

Q.9 दिए गए वाक्य का वह भाग ज्ञात करें जिसमें कोई त्रुटि है।

फूलों का गुच्छा अतिथि पर सादर भेंट किया गया।

Ans

1. अतिथि पर
2. किया गया।
3. सादर भेंट
4. फूलों का गुच्छा

Q.1 रिक्त स्थान को भरने के लिए उपयुक्त शब्द का चयन करें।

इस बात से _____ क्या।

- Ans
1. मेरे से
 2. मुझे
 3. मैंने
 4. आप

Question ID : 9895805621
Chosen Option : 2

Q.1 दिए गए शब्द का विलोम चुनें।

आस्था

- Ans
1. क्षमा
 2. अनास्था
 3. प्रार्थना
 4. विराग

Question ID : 9895805630
Chosen Option : 2

Q.1 दिए गए वाक्य का वह भाग ज्ञात करें जिसमें कोई त्रुटि है।

आज मैं आपके दर्शन करके धन्यता हो गया।

- Ans
1. करके धन्यता
 2. आज मैं
 3. आपके दर्शन
 4. हो गया।

Question ID : 9895805614
Chosen Option : 1

Comprehension:

निम्नलिखित गद्यांश के रिक्त स्थानों की पूर्ति गद्यांश के नीचे दिए गए प्रश्नों के अनुसार कीजिए -

महापुरुषों ने समय को सच्चा _____ (1) माना है। वह इसलिए क्योंकि सभी मनुष्यों को अनेक प्रकार की _____ (2) समय स्वयं ही देता रहता है। मान लीजिये, किसी को ट्रेन पकड़नी है, यदि वह ठीक समय पर रेलवे स्टेशन पर _____ (3) जाएगा तभी वह _____ (4) को पकड़ सकेगा। एक क्षण की _____ (5) से ट्रेन छूट जाएगी। तब वह अवश्य ही पश्चाताप से भर कर अपने मन में सोचेगा कि काश मैं दो चार क्षण पहले ही चल देता।

SubQuestion No : 13

Q.1
3 गद्यांश में संकेतित रिक्त स्थान (1) के लिए उपयुक्त शब्द होगा -

- Ans
1. गुरु
 2. गायक
 3. शत्रु
 4. पुत्र

Question ID : 9895805625
Chosen Option : 1

Comprehension:

निम्नलिखित गद्यांश के रिक्त स्थानों की पूर्ति गद्यांश के नीचे दिए गए प्रश्नों के अनुसार कीजिए -

महापुरुषों ने समय को सच्चा _____ (1) माना है। वह इसलिए क्योंकि सभी मनुष्यों को अनेक प्रकार की _____ (2) समय स्वयं ही देता रहता है। मान लीजिये, किसी को ट्रेन पकड़नी है, यदि वह ठीक समय पर रेलवे स्टेशन पर _____ (3) जाएगा तभी वह _____ (4) को पकड़ सकेगा। एक क्षण की _____ (5) से ट्रेन छूट जाएगी। तब वह अवश्य ही पश्चाताप से भर कर अपने मन में सोचेगा कि काश मैं दो चार क्षण पहले ही चल देता।

SubQuestion No : 14

Q.1
4 गद्यांश में संकेतित रिक्त स्थान (2) के लिए उपयुक्त शब्द होगा -

- Ans
1. भोजन
 2. आकाश

3. शिक्षाएँ

4. वायु

Question ID : 9895805626
Chosen Option : 3

Comprehension:

निम्नलिखित गद्यांश के रिक्त स्थानों की पूर्ति गद्यांश के नीचे दिए गए प्रश्नों के अनुसार कीजिए -

महापुरुषों ने समय को सच्चा _____ (1) माना है। वह इसलिए क्योंकि सभी मनुष्यों को अनेक प्रकार की _____ (2) समय स्वयं ही देता रहता है। मान लीजिये, किसी को ट्रेन पकड़नी है, यदि वह ठीक समय पर रेलवे स्टेशन पर _____ (3) जाएगा तभी वह _____ (4) को पकड़ सकेगा। एक क्षण की _____ (5) से ट्रेन छूट जाएगी। तब वह अवश्य ही पश्चात्ताप से भर कर अपने मन में सोचेगा कि काश मैं दो चार क्षण पहले ही चल देता।

SubQuestion No : 15

Q.1
5 गद्यांश में संकेतित रिक्त स्थान (3) के लिए उपयुक्त शब्द होगा -

Ans

1. लड़ाई
2. पहुँच
3. उड़
4. लेट

Question ID : 9895805627
Chosen Option : 2

Comprehension:

निम्नलिखित गद्यांश के रिक्त स्थानों की पूर्ति गद्यांश के नीचे दिए गए प्रश्नों के अनुसार कीजिए -

महापुरुषों ने समय को सच्चा _____ (1) माना है। वह इसलिए क्योंकि सभी मनुष्यों को अनेक प्रकार की _____ (2) समय स्वयं ही देता रहता है। मान लीजिये, किसी को ट्रेन पकड़नी है, यदि वह ठीक समय पर रेलवे स्टेशन पर _____ (3) जाएगा तभी वह _____ (4) को पकड़ सकेगा। एक क्षण की _____ (5) से ट्रेन छूट जाएगी। तब वह अवश्य ही पश्चाताप से भर कर अपने मन में सोचेगा कि काश मैं दो चार क्षण पहले ही चल देता।

SubQuestion No : 16

Q.1
6 गद्यांश में संकेतित रिक्त स्थान (4) के लिए उपयुक्त शब्द होगा -

Ans

1. ट्रेन
- ✗ 2. जहाज
3. साइकिल
- ✗ 4. बस

Question ID : 9895805628
Chosen Option : 1

Comprehension:

निम्नलिखित गद्यांश के रिक्त स्थानों की पूर्ति गद्यांश के नीचे दिए गए प्रश्नों के अनुसार कीजिए -

महापुरुषों ने समय को सच्चा _____ (1) माना है। वह इसलिए क्योंकि सभी मनुष्यों को अनेक प्रकार की _____ (2) समय स्वयं ही देता रहता है। मान लीजिये, किसी को ट्रेन पकड़नी है, यदि वह ठीक समय पर रेलवे स्टेशन पर _____ (3) जाएगा तभी वह _____ (4) को पकड़ सकेगा। एक क्षण की _____ (5) से ट्रेन छूट जाएगी। तब वह अवश्य ही पश्चाताप से भर कर अपने मन में सोचेगा कि काश मैं दो चार क्षण पहले ही चल देता।

SubQuestion No : 17

Q.1
7 गद्यांश में संकेतित रिक्त स्थान (5) के लिए उपयुक्त शब्द होगा -

Ans

1. ऊँचाई
- ✗ 2. लक्ष्य

3. देरी
4. जल्दी

Question ID : 9895805629
Chosen Option : 3

Q.1
8 रिक्त स्थान को भरने के लिए उपयुक्त शब्द का चयन करें।

हम _____ साथ पूर्ण सहयोग करेंगे।

- Ans 1. आप
2. आपके
 3. हमारे
 4. अपने

Question ID : 9895805622
Chosen Option : 2

Q.1
9 दिये गये वाक्यांश के लिए एक शब्द दीजिये।

जिसका आदि न हो

- Ans 1. अमर
2. अनंत
 3. अजर
 4. अनादि

Question ID : 9895805636
Chosen Option : 4

Q.2
0 निम्नलिखित में से उस विकल्प का चयन करें जो 'दूर के ढोल सुहावने' मुहावरे का अर्थ व्यक्त करता है।

- Ans 1. दूर की वस्तुएँ अच्छे लगना
2. दूर से ढोल सुनना
 3. दूर के ढोल अच्छे लगना
 4. दूर से लोगों को देखना

Question ID : 9895805634
Chosen Option : 4

Q.2
1 सही वर्तनी वाले शब्द का चयन करें।

- Ans
1. चिकित्सालय
 2. चिकीतसालय
 3. चिकीत्सालय
 4. चीकित्सालय

Question ID : 9895805638

Q.2 दिए गए वाक्य में रेखांकित खंड को प्रतिस्थापित करने के लिए उपयुक्त विकल्प का चयन करें।

रात होने के कारण जहाँ रुके हैं, यहाँ पर डेरा डाल लेते हैं।

Ans

1. कहाँ पर डेरा डाल लेता है।
2. वहीं पर डेरा डाल लेते हैं।
3. कहीं पर डेरा डाल लेते हैं।
4. जहाँ पर डेरा डाल लेते हैं।

Question ID : 9895805617
Chosen Option : 2

Q.2 निम्नलिखित में से उस विकल्प का चयन करें जो 'दो नावों पर पैर रखना' मुहावरे का अर्थ व्यक्त करता है।

Ans

1. नदी पार करना
2. एक साथ कई काम करना
3. दो विरोधी पक्षों का आश्रय लेना
4. दो नावों पर एक साथ घूमना

Question ID : 9895805635
Chosen Option : 2

Q.2 दिए गए शब्द का विलोम चुनें।

दुर्लभ

Ans

1. अलभ
2. सुलभ
3. सज्जन
4. दुर्जन

Question ID : 9895805631
Chosen Option : 1

Q.2 दिए गए वाक्य का वह भाग ज्ञात करें जिसमें कोई त्रुटि है।

जब धन की आवश्यकता होती है तब किसी से उधार माँगने का नौबत आ जाती है।

Ans

1. उधार माँगने का नौबत आ जाती है।
2. तब किसी से
3. आवश्यकता होती है
4. जब धन की

Question ID : 9895805616
Chosen Option : 1

Constable (GD) in CAPFs, NIA, SSF and Rifleman (GD) in Assam Rifles Examination, 2018

Roll No. :	
Registration No.	
Name :	
Exam Venue :	iON Digital Zone iDZ Gram Raigawan Near Patan Bypass
Exam Time :	4:00 PM - 5:30 PM
Exam Date :	19/02/2019

Section : **General Section**

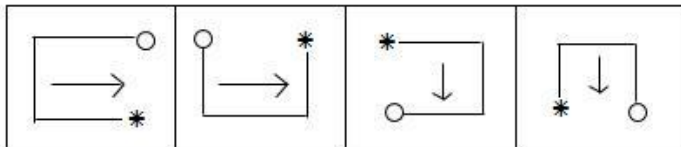
Q.1 Four numbers have been given out of which three are alike in some manner, while one is different. Choose the odd one.

- Ans ✔ 1. 1321
✘ 2. 729
✘ 3. 125
✘ 4. 343

Question ID : **9895803942**
Chosen Option : 1

Q.2

Choose the option that would follow next in the given figure series.



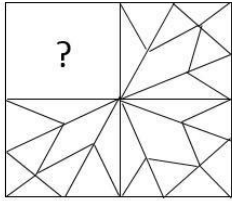
Ans

- ✘ 1.
- ✔ 2.
- ✘ 3.
- ✘ 4.

Question ID : **9895803945**
Chosen Option : 1

Q.3

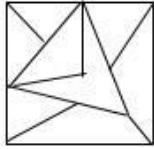
Select the figure which when placed in the blank space of the figure marked 'X' would complete the pattern.



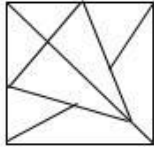
(X)

Ans

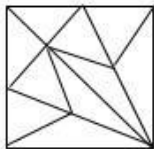
1.



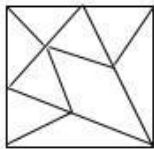
2.



3.



4.



Question ID : 9895803946
Chosen Option : 4

Q.4 Which number will follow next in the given number series?

15, 12, 19, 14, 25, 16, ?

Ans 1. 35

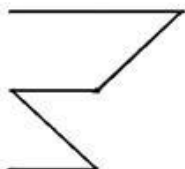
2. 33

3. 29

4. 31

Question ID : 9895803939
Chosen Option : 2

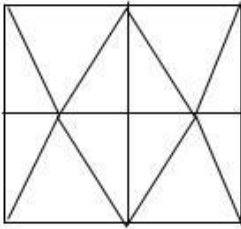
Q.5 Choose the option in which the figure marked 'X' is embedded.



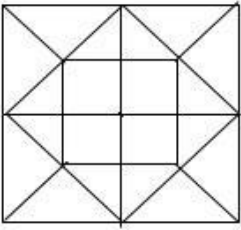
(X)

Ans

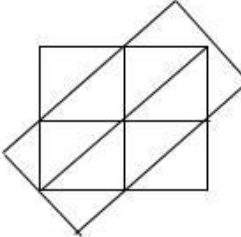
✗ 1.



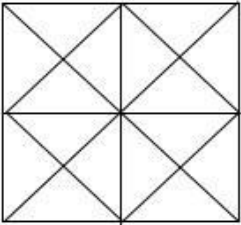
✗ 2.



✗ 3.



✓ 4.



Question ID : 9895803948
Chosen Option : 4

Q.6 Pick the odd one out.

- Ans
- ✗ 1. Tyre
 - ✓ 2. Plate
 - 3. Ring
 - 4. Bangle

Question ID : 9895803928
Chosen Option : 2

Q.7 AGENDA is related to MEETING in the same way as PROGRAMME is related to:

- Ans
- ✓ 1. FUNCTION
 - ✗ 2. SPEECH
 - ✗ 3. INAUGURATION
 - ✗ 4. ORGANISATION

Question ID : 9895803929
Chosen Option : 1

Q.8 Which one of the following four-letter clusters does NOT belong to the group?

- Ans
- ✗ 1. KQOM
 - ✗ 2. CIGE

3. PVTR
 4. WZXY

Question ID : 9895803927
Chosen Option : 4

Q.9 The statements below are followed by two conclusions labeled I and II. Assuming that the information in the statements is true, even if it appears to be at variance with generally established facts, decide which conclusion(s) logically and definitely follow(s) from the information given in the statements.

Statements:

1. All roads are streets.
2. Some streets are avenues.

Conclusions:

- I. Some roads are avenues.
- II. All avenues are roads.

- Ans** 1. Neither conclusion I nor II follows
 2. Both conclusions I and II follow
 3. Only conclusion II follows
 4. Only conclusion I follows

Question ID : 9895803937
Chosen Option : 3

Q.1 Select the option that is related to the third term in the same way as the second term is related to the first term.
0

Temple : Worship :: Court : ?

- Ans** 1. Lawyer
 2. Argument
 3. Judge
 4. Jurisdiction

Question ID : 9895803930
Chosen Option : 4

Q.1 Six girls are sitting in a row facing West. Kim is to the left of Sima and Sony is between Piku and Ria. There are two people seated between Piku and Sima, who is separated from Neela by one person. If Piku is seated at one end of the row, who is at the other end?
1

- Ans** 1. Neela
 2. Sima
 3. Ria
 4. Kim

Question ID : 9895803935
Chosen Option : 1

Q.1 The numbers in the following set are related in a certain way. Choose the set that is similar to the following set:
2

{128, 8, 32}

- Ans** 1. {144, 36, 72}

2. {196, 7, 14}
3. {64, 4, 16}
4. {122, 10, 30}

Question ID : 9895803943
Chosen Option : 3

Q.1 Select the correct option that will fill in the blank and complete the series.

3

dmt, fkv, ihy, mdc, ____

- Ans
1. rxi
 2. rzh
 3. qzl
 4. ryh

Question ID : 9895803926
Chosen Option : 2

Q.1 Select the option that is related to the third term in the same way as the second term is related to the first term.

4

BYWD : DWUF :: FUSH : ?

- Ans
1. HSQJ
 2. JQOL
 3. HSJQ
 4. HTRJ

Question ID : 9895803931
Chosen Option : 1

Q.1 R is taller than T. Both P and Q are taller than S, whose height is between P and T. If S is taller than T, who is the shortest?

5

- Ans
1. Q
 2. S
 3. P
 4. T

Question ID : 9895803936
Chosen Option : 4

Q.1 If in a code language ADVENTURES is coded as VDANEUTSER, then SYSTEMATIC would be coded as:

6

- Ans
1. YSTSMETACI
 2. SYSETAMCIT
 3. SYSMETITAC
 4. CITETAMSYS

Question ID : 9895803932
Chosen Option : 2

Q.1 Six persons A, B, C, D, E and F are sitting around a round table facing the centre. B is seated to the left of D. E is seated to the right of C. A is facing F, who is seated to the left of C. Who is seated to the left of A?

7

- Ans 1. E
 2. B
 3. C
 4. D

Question ID : 9895803934
Chosen Option : 2

Q.1 The statements below are followed by two conclusions labeled I and II. Assuming that the information in the statements is true, even if it appears to be at variance with generally established facts, decide which conclusion(s) logically and definitely follow(s) from the information given in the statements.

Statements:

1. Some animals are tigers.
2. All tigers are vertebrates.

Conclusions:

- I. All vertebrates are tigers.
- II. Some vertebrates are animals.

- Ans 1. Only conclusion II follows
 2. Neither conclusion I nor II follows
 3. Only conclusion I follows
 4. Both conclusion I & II follow

Question ID : 9895803938
Chosen Option : 4

Q.1 Select the correct option that will fill in the blank and complete the series.

5, ____, 10, 19, 35, 60

- Ans 1. 9
 2. 7
 3. 8
 4. 6

Question ID : 9895803940
Chosen Option : 4

Q.2 Which two signs should be interchanged to make the following equation correct?

$$6 \times 2 + 8 - 16 \div 4 = 18$$

- Ans 1. + and ÷
 2. + and ×
 3. - and ÷
 4. × and ÷

Question ID : 9895803944
Chosen Option : 2

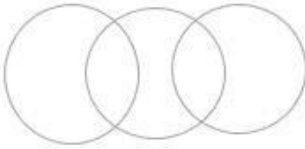
Q.2

1 Which of the following Venn diagrams correctly represents the relationships among the classes:

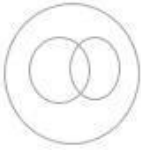
Products, Factory, Machines

Ans

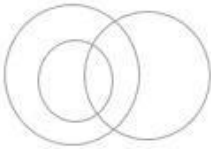
1.



2.



3.



4.



Question ID : 9895803950
Chosen Option : 4

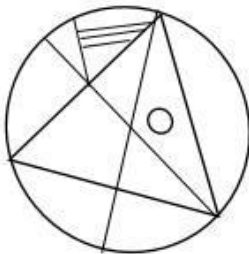
Q.2 Choose the alternative which most closely resembles the mirror image of the given word when mirror is placed at right side.

2 side.

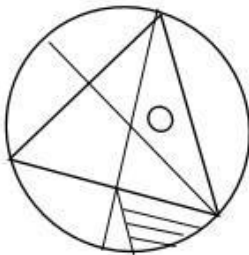


Ans

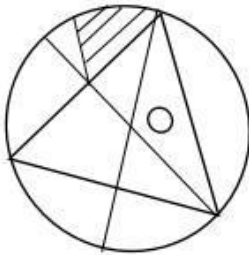
1.



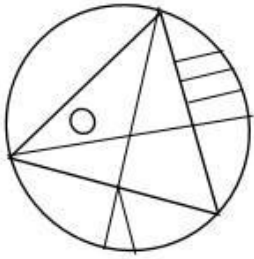
2.



3.

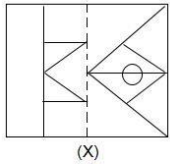


X 4.



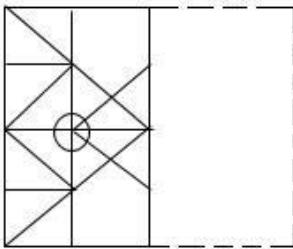
Question ID : 9895803947
Chosen Option : 3

Q.2 How would the pattern given on the square transparent sheet marked 'X' look when the sheet is folded along the dotted line?
3 line?

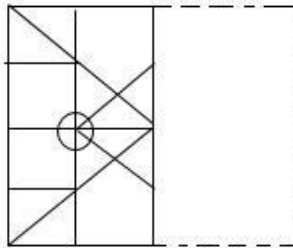


Ans

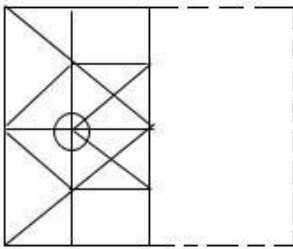
X 1.



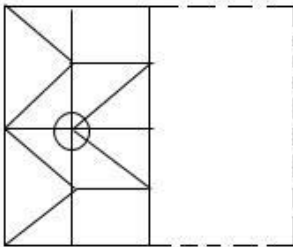
X 2.



✓ 3.



X 4.




Question ID : 9895803949
Chosen Option : 4

Q.2
4 Pick the odd pair out.

Ans X 1. 17-49





✓ 2. 15-41

X 3. 9-25

 4. 5-13





Question ID : 9895803941
Chosen Option : 3

Q.2
5 If in a code language BADE = 1254 and HATE= 18520, then HEALER = ?

- Ans
-  1. 18512158
 -  2. 58112158
 -  3. 58121185
 -  4. 15818512

Question ID : 9895803933
Chosen Option : 2

Q.2
6 India recognizes the Right to _____ as being part of Right to Life (Article 21).

- Ans
-  1. Water
 -  2. Medication
 -  3. Acceptance
 -  4. Fitness

Question ID : 9895805472
Chosen Option : 3

Q.2
7 Neutral, expansionary, and contractionary strategies are related to which policy of the government?

- Ans
- 1. Banking policy
 - 2. Fiscal policy
 - 3. Monetary policy
 - 4. Budgetary policy




Question ID : 9895805467
Chosen Option : 1

Q.2
8 During whose rule was the historical Nalanda University established?

- Ans
-  1. Bindusara
 - 2. Chandragupta
 -  3. Kumaragupta
 -  4. Dasratha

Question ID : 9895805481
Chosen Option : 1

Q.2
9 Which among the following is the smallest mountain range in the world?

- Ans
-  1. Ural
 -  2. Sierra Nevada
 - 3. Alps
 -  4. Sutter Buttes

Question ID : 9895805479

Q.3
0 'Hemis Festival' is celebrated in which Indian state?

- Ans
- 1. Karnataka
 - 2. Punjab
 - 3. Tamil Nadu
 - 4. Jammu and Kashmir

Question ID : 9895805460
Chosen Option : 4

Q.3
1 Which city among the following is the most densely populated city, as of 2018?

- Ans
- 1. Paris
 - 2. Shanghai
 - 3. Istanbul
 - 4. Tokyo

Question ID : 9895805480
Chosen Option : 4

Q.3
2 Who has won Sayed Modi India Grand Prix Gold Badminton Title 2018 in Men's Singles Titles?

- Ans
- 1. Srikanth Kidambi
 - 2. Prannoy Kumar
 - 3. Ajay Jayaram
 - 4. Sameer Verma

Question ID : 9895805463
Chosen Option : 1

Q.3
3 'Bishan Singh Bedi' is a legendary Indian player of:

- Ans
- 1. hockey
 - 2. cricket
 - 3. football
 - 4. lawn tennis

Question ID : 9895805462
Chosen Option : 1

Q.3
4 Aravind Adiga got the prestigious Man Booker Prize for which book?

- Ans
- 1. God of Small Things
 - 2. The White Tiger
 - 3. Selection Day
 - 4. The Kite Runner

Question ID : 9895805464
Chosen Option : 3

Q.3 Eminent economist and columnist _____ has resigned as part time member of Economic Advisory Council to the Prime Minister Narendra Modi.

- Ans
1. Raghuram Rajan
 2. Jagdish Bhagwati
 3. Arvind Subramanian
 4. Surjit Bhalla

Question ID : 9895805468
Chosen Option : 2

Q.3 Which Indian state has the largest area under forest cover?

- Ans
1. Kerala
 2. Chhattisgarh
 3. Madhya Pradesh
 4. Arunachal Pradesh

Question ID : 9895805476
Chosen Option : 3

Q.3 'Jhumur' a traditional dance form, is performed in which of the following states?

- Ans
1. Odisha
 2. Madhya Pradesh
 3. Assam
 4. Bengal

Question ID : 9895805459
Chosen Option : 1

Q.3 'The Mousetrap' was a famous play written by:

- Ans
1. George Bernard Shaw
 2. William Shakespeare
 3. Agatha Christie
 4. Caryl Churchill

Question ID : 9895805465
Chosen Option : 1

Q.3 The ancient cities of Harappa and Mohenjo-Daro emerged along the banks of which river?

- Ans
1. Brahmaputra River
 2. Baghmata River
 3. Ganga River
 4. Indus River

Question ID : 9895805482
Chosen Option : 4

Q.4 The famous 'Ratnagiri Monastery' is located in which Indian state?

- Ans 1. Orissa
 2. Jharkhand
 3. Karnataka
4. Gujarat

Question ID : 9895805461
Chosen Option : 4

Q.4 What was the event that fundamentally changed Sardar Vallabhbhai Patel's life and drove him towards politics?
1

- Ans 1. Meeting with Mahatma Gandhi in Godhra (year 1917)
2. Bardoli Satyagraha (year 1928)
3. The Gandhi Irwin Pact (year 1931)
4. Non-Cooperation Movement (year 1922)

Question ID : 9895805483
Chosen Option : 1

Q.4 In which year was the Right to Education Act enacted in India?
2

- Ans 1. 2009
 2. 2004
 3. 2011
 4. 2006

Question ID : 9895805471
Chosen Option : 2

Q.4 In which year did Ms. Sushmita Sen become the first Indian woman to win the 'Miss Universe' title?
3

- Ans 1. 1991
 2. 1994
 3. 1998
 4. 1996

Question ID : 9895805466
Chosen Option : 2

Q.4 Which of the following is regarded as the shortest river of India?
4

- Ans 1. Kaveri
 2. Arvari
 3. Godavari
 4. Narmada

Question ID : 9895805478
Chosen Option : 2

Q.4 Which of the following is a nocturnal animal?
5

- Ans 1. Porcupine
 2. Murids

3. Hamster

4. Bat

Question ID : 9895805475
Chosen Option : 4

Q.4
6 What is the SI unit for the measurement of pressure?

Ans 1. Newton

2. Pascal

3. Joule

4. Ampere

Question ID : 9895805473
Chosen Option : 2

Q.4
7 Which country among the following options has the shortest constitution in the world?

Ans 1. United Kingdom

2. Norway

3. United States of America

4. India

Question ID : 9895805470
Chosen Option : 2

Q.4
8 Who is the founder of 'Sulabh Sanitation and Social Reform Movement'?

Ans 1. Baba Amte

2. Medha Patkar

3. Aruna Roy

4. Dr Bindeshwar Pathak

Question ID : 9895805477
Chosen Option : 2

Q.4
9 Baking soda, the common cooking ingredient, has which of the following chemical name?

Ans 1. Sodium bicarbonate

2. Sodium chloride

3. Sodium benzoate

4. Monosodium glutamate

Question ID : 9895805474
Chosen Option : 1

Q.5
0 Union Cabinet has decide to raise contribution of Central Government to National Pension System (NPS) corpus of its employee from 10% to _____.

Ans 1. 20%

2. 14%

3. 12%

4.

Q.5 Study the following table, (which shows the number of units of an item manufactured and sold by 5 companies) and answer the question.

Company	No. of Units (in thousand)	
	Manufactured	Sold
A	42	30
B	45	32
C	36	26
D	51	36
E	54	40

Which Company sold the highest percentage of units as compared to manufactured by it?

- Ans 1. C
 2. B
 3. E
 4. A

Q.5 Walking at 75 % of his usual speed, Raghu is 80 minutes late to his office. What is his usual time in hours to cover the same distance?

- Ans 1. 5
 2. $4\frac{1}{2}$
 3. 4
 4. $3\frac{1}{2}$

Q.5 Let x be the least number which when divided by 10, 12, 14 and 16 leaves the remainders 2, 4, 6 and 8, respectively, but x is divisible by 17. When x is divided by 52, the quotient is:

- Ans 1. 99
 2. 95
 3. 92
 4. 96

Q.5 What is the average of the mean, median and range of the data:

34, 41, 6, 13, 27, 20, 48, and 55 ?

- Ans 1. $36\frac{1}{3}$
 2. $30\frac{1}{3}$
 3. $36\frac{2}{3}$
 4. $30\frac{1}{2}$

Q.5 Note-books are bought at 16 for ₹700 and sold at 11 for ₹500. How many notebooks should be sold to gain ₹450?
5

- Ans 1. 272
 2. 254
 3. 264
 4. 260

Question ID : 9895805769
Chosen Option : 2

Q.5 Working together A, B and C can complete a piece of work in 24 days. After working together for 4 days, C left the work. A and B completed the remaining work in 30 days. The number of days taken by C alone to complete the same work is:
6

- Ans 1. 72
 2. 90
 3. 54
 4. 60

Question ID : 9895805785
Chosen Option : 4

Q.5 The value of:
7

$$\frac{3}{8} \text{ of } \frac{4}{5} \div 1\frac{1}{5} + \frac{3}{7} \text{ of } \frac{7}{12} \div \frac{1}{40} \text{ of } \frac{2}{5} - 3\frac{2}{3} \div \frac{11}{30} \text{ of } \frac{2}{3}$$

- Ans 1. $3\frac{1}{3}$
 2. $10\frac{1}{4}$
 3. $2\frac{1}{2}$
 4. $2\frac{1}{4}$

Question ID : 9895805766
Chosen Option : 2

Q.5 Study the following table, (which shows the number of units of an item manufactured and sold by 5 companies) and answer the question.
8

Company	No. of Units (in thousand)	
	Manufactured	Sold
A	42	30
B	45	32
C	36	26
D	51	36
E	54	40

The ratio of the number of units manufactured by companies C and E together and the number of units sold by A and D together is?

- Ans 1. 17 : 15
 2. 15 : 11
 3. 24 : 13
 4. 15 : 13

Question ID : 9895805788
Chosen Option : 1

Q.5 Study the following table, (which shows the number of units of an item manufactured and sold by 5 companies) and answer the question.

Company	No. of Units (in thousand)	
	Manufactured	Sold
A	42	30
B	45	32
C	36	26
D	51	36
E	54	40

What percent of total number of units sold by companies A, B and D is equal to the number of units manufactured by company C? (correct to one decimal place)

- Ans
- 1. 40.9
 - 2. 35.6
 - 3. 36.7
 - 4. 33.3

Question ID : 9895805789
Chosen Option : 3

Q.6 A sum of ₹6900 was lent partly at 5% and the rest at 8% simple interest. Total interest received after 3 years from both was ₹1359. What was the ratio of money lent at 5% and 8%?

- Ans
- 1. 31 : 38
 - 2. 11 : 12
 - 3. 10 : 13
 - 4. 14 : 9

Question ID : 9895805777
Chosen Option : 4

Q.6 The compound interest on a sum of ₹15800 for 2 years at 9% per annum, when the interest is compound 8 monthly, is (nearest to a rupee):

- Ans
- 1. ₹2992
 - 2. ₹2956
 - 3. ₹3016
 - 4. ₹3018

Question ID : 9895805778
Chosen Option : 2

Q.6 If x is subtracted from each other of 17, 14, 22 and 18 then these numbers are in proportion, in this order. What is the mean proportion between $9x$ and $5x$?

- Ans
- 1. $6\sqrt{5}$
 - 2. 7
 - 3. $3\sqrt{5}$
 - 4. 6

Question ID : 9895805773
Chosen Option : 3

Q.6 A person bought 80 m cloth at ₹110 per m and sold 75% of it at a gain of 6%. At what gain percent did he sell the remaining cloth, if he gained 10% on his outlay?

- Ans
- 1. 28%
 - 2. 22%

3. 24 %

4. 26 %

Question ID : 9895805770

Chosen Option : 2

Q.6 Two trains start at the same time, P from A to B and Q from B to A. If they arrive at B and A, respectively, $2\frac{1}{2}$ hours and 10 hours after they passed each other, and the speed of P is 90 km/hr, then the speed of Q in km/hr is?

Ans 1. 80

2. 45

3. 75

4. 60

Question ID : 9895805783

Chosen Option : 3

Q.6 The average ages of boys and girls in a class is 14.5 years and 15 years respectively. If the ratio of the number of boys and girls is 2 : 3, then what is the average age (in years) of all students in the class?

Ans 1. 14.6

2. 15.4

3. 15.2

4. 14.8

Question ID : 9895805776

Chosen Option : 1

Q.6 Amina saves 16% of her income. Now her income is increased by 20% but she still saves the same amount as before. What is the percentage increase in her expenditure?

Ans 1. 23.8

2. 24.2

3. 20.4

4. 21.6

Question ID : 9895805771

Chosen Option : 3

Q.6 Two alloys A and B contain copper and zinc in the ratio 7 : 2 and 5 : 3 respectively. How many kg of A and B must be melted in order to get an alloy of 44 kg containing copper and zinc in the ratio 3 : 1?

Ans 1. 24 kg, 20 kg

2. 28 kg, 16 kg

3. 30 kg, 14 kg

4. 36 kg, 8 kg

Question ID : 9895805772

Chosen Option : 2

Q.6 The diagonal of a rectangle field is 15 m and its area is 108 m^2 . What is the cost of fencing the field at ₹50.50 per m?

Ans 1. ₹1919

2. ₹2020

3. ₹2222

4.

Question ID : 9895805780
Chosen Option : 2

Q.6 The value of $[9.5 \div (0.6 \times 0.75 + 0.8 \div 16) + 0.75] \div (0.03 \div 0.6 \text{ of } 0.01)$ lies between:

- Ans 1. 3 and 4
 2. 1 and 2
 3. 2 and 3
 4. 0 and 1

Question ID : 9895805767
Chosen Option : 3

Q.7 A shopkeeper marks the price of an article 25% above its cost price. After allowing 10% discount on the market price, the article is sold for ₹720. What is the difference (in ₹) between the cost price and market price of the article?

- Ans 1. 150
 2. 160
 3. 180
 4. 120

Question ID : 9895805768
Chosen Option : 2

Q.7 The volume of a right circular cone is 2464 cm^3 . If the radius of its base is 14 cm, then its curved surface area (in cm^2) is: (take $\pi = \frac{22}{7}$)

- Ans 1. $44\sqrt{85}$
 2. $44\sqrt{58}$
 3. $88\sqrt{58}$
 4. $88\sqrt{85}$

Question ID : 9895805782
Chosen Option : 2

Q.7 The average of 15 numbers is 56. The average of first 8 numbers is 54.4 and that of last 8 numbers is 56.6. If 8th number is excluded then what is the average of the remaining numbers? (correct to one decimal place)

- Ans 1. 53.8
 2. 56.2
 3. 53.6
 4. 56.6

Question ID : 9895805775
Chosen Option : 2

Q.7 A can do $\frac{3}{5}$ th of a work in 12 days, B can do $\frac{1}{3}$ rd of that work in 15 days. They worked together for 12 days and then A left the work, B alone will complete the remaining work in?

- Ans 1. 6 days
 2. 4 days
 3. 9 days
 4. 5 days

Question ID : 9895805786
Chosen Option : 3

Q.7 How many spherical balls each of 2cm radius can be made out of a solid metallic cube of edge 44 cm? (take $\pi = \frac{22}{7}$)

- Ans 1. 2541
 2. 2448
 3. 2420
 4. 2532

Question ID : 9895805781
Chosen Option : 3

Q.7 A sum of ₹ x is divided among A, B and C such that the ratio of shares of A and B is 3 : 4 and that of B and C is 5 : 6. If C receives ₹1440 more than what A receives, then the value of x is?

- Ans 1. 9600
 2. 9440
 3. 9280
 4. 9000

Question ID : 9895805774
Chosen Option : 3

Section : English Language

Q.1 Select the most appropriate option to substitute the underlined segment in the given sentence. If there is no need to substitute it, select No improvement.

Dancing around a totem pole was one of the favourite pastimes of the American Indians.

- Ans 1. were one of the favourite pastimes
 2. No improvement
 3. was one of the favourite pastime
 4. are the favourite pastimes

Question ID : 9895805311
Chosen Option : --

Q.2 Select the synonym of the given word.

GALLANT

- Ans 1. Wild
 2. Courageous
 3. Violent
 4. Wealthy

Question ID : 9895805322
Chosen Option : --

Comprehension:

In the following passage some words have been deleted. Fill in the blanks with the help of the alternatives given.

After my job was over, I went to Mumbai and returned after (1) _____ six months. I had barely taken (2) _____ my clothes when I saw Ratan standing (3) _____ a new baby. He was (4) _____ with joy. Even my daughter could not have (5) _____ such joy on finding her younger brother after several years.

SubQuestion No : 3

Q.3 Select the most appropriate option that will fill in the blank number 1.

- Ans 1. hardly
 2. merely
 3. nearly
 4. rarely

Question ID : 9895805317
Chosen Option : --

Comprehension:

In the following passage some words have been deleted. Fill in the blanks with the help of the alternatives given.

After my job was over, I went to Mumbai and returned after (1) _____ six months. I had barely taken (2) _____ my clothes when I saw Ratan standing (3) _____ a new baby. He was (4) _____ with joy. Even my daughter could not have (5) _____ such joy on finding her younger brother after several years.

SubQuestion No : 4

Q.4 Select the most appropriate option that will fill in the blank number 2.

- Ans 1. away
 2. of
 3. over
 4. off

Question ID : 9895805318
Chosen Option : --

Comprehension:

In the following passage some words have been deleted. Fill in the blanks with the help of the alternatives given.

After my job was over, I went to Mumbai and returned after (1) _____ six months. I had barely taken (2) _____ my clothes when I saw Ratan standing (3) _____ a new baby. He was (4) _____ with joy. Even my daughter could not have (5) _____ such joy on finding her younger brother after several years.

SubQuestion No : 5

Q.5 Select the most appropriate option that will fill in the blank number 3.

Ans

1. along

2. near

3. by

4. with

Question ID : 9895805319
Chosen Option : --

Comprehension:

In the following passage some words have been deleted. Fill in the blanks with the help of the alternatives given.

After my job was over, I went to Mumbai and returned after (1) _____ six months. I had barely taken (2) _____ my clothes when I saw Ratan standing (3) _____ a new baby. He was (4) _____ with joy. Even my daughter could not have (5) _____ such joy on finding her younger brother after several years.

SubQuestion No : 6

Q.6 Select the most appropriate option that will fill in the blank number 4.

- Ans
1. dancing
 2. singing
 3. bursting
 4. skipping

Question ID : 9895805320
Chosen Option : --

Comprehension:

In the following passage some words have been deleted. Fill in the blanks with the help of the alternatives given.

After my job was over, I went to Mumbai and returned after (1) _____ six months. I had barely taken (2) _____ my clothes when I saw Ratan standing (3) _____ a new baby. He was (4) _____ with joy. Even my daughter could not have (5) _____ such joy on finding her younger brother after several years.

SubQuestion No : 7

Q.7 Select the most appropriate option that will fill in the blank number 5.

- Ans
1. thought
 2. understood
 3. felt
 4. advised

Question ID : 9895805321
Chosen Option : --

Q.8 Select the correctly spelt word.

- Ans
1. Throughfare

2. Thoroughfare

3. Thoroghfare

4. Thoroufare

Question ID : 9895805330

Chosen Option : --

Q.9 Select the word which means the same as the group of words given.

A city which is multicultural

Ans 1. Metro

2. Urban

3. Global

4. Cosmopolitan

Question ID : 9895805329

Chosen Option : --

Q.1 Select the most appropriate option to substitute the underlined segment in the given sentence. If there is no need to substitute it, select No improvement.

The GATT Treaty, it is explained, would allow subsidised to the extent of 10% of the market price.

Ans 1. would allow supply

2. would allow support

3. No improvement

4. would allow subsidy

Question ID : 9895805312

Chosen Option : --

Q.1
1 Select the antonym of the given word.

DUBIOUS

Ans 1. Doubtful

2. Docile

3. Faithful

4. Certain

Question ID : 9895805325

Chosen Option : --

Q.1
2 Select the antonym of the given word.

HOSTILE

Ans 1. Negative

2. Serene

3. Optimistic

4. Friendly

Question ID : 9895805324

Chosen Option : --

Q.1
3 Select the synonym of the given word.

IMPAIR

- Ans
- 1. Weaken
 - 2. Introduce
 - 3. Combine
 - 4. Improve

Question ID : 9895805323
Chosen Option : --

Q.1
4 Select the most appropriate option to substitute the underlined segment in the given sentence. If there is no need to substitute it, select No improvement.

Operation Flood was started with the primary objective for linking rural producers with urban consumers.

- Ans
- 1. No improvement
 - 2. was started with the primary objectives of
 - 3. was started with primary objective
 - 4. was started with the primary objective of

Question ID : 9895805313
Chosen Option : --

Q.1
5 From the given options, identify the segment in the sentence which contains the grammatical error.

Every one of the survivor of the capsized ship has told the same story.

- Ans
- 1. capsized ship
 - 2. of the survivor
 - 3. Every one
 - 4. the same story

Question ID : 9895805310
Chosen Option : --

Q.1
6 Select the option that means the same as the given idiom.

In the good books

- Ans
- 1. To accompany good people
 - 2. To be in favour of
 - 3. To do favourable things
 - 4. To collect good books

Question ID : 9895805326
Chosen Option : --

Q.1
7 Select the correctly spelt word.

- Ans
- 1. Equivelent
 - 2. Equivalent

3. Equivalent
4. Equivalant

Question ID : 9895805331
Chosen Option : --

Q.1
8 Select the option that means the same as the given idiom.

To sound a red alert.

- Ans
1. To raise an alarm
 2. To press a red button
 3. To hear an alarm
 4. To wave a red flag

Question ID : 9895805327
Chosen Option : --

Q.1
9 Select the most appropriate word to fill in the blank.

A successful entertainer _____ the right mood before beginning a joke or story.

- Ans
1. enjoys
 2. spreads
 3. creates
 4. engages

Question ID : 9895805333
Chosen Option : --

Q.2
0 From the given options, identify the segment in the sentence which contains the grammatical error:

The speech he made on his visit to our college concerning our society's needs have bothered me greatly.

- Ans
1. The speech
 2. have bothered
 3. concerning our
 4. on his visit

Question ID : 9895805309
Chosen Option : --

Q.2
1 Select the most appropriate option to fill in the blank.

If you listened carefully, you _____.

- Ans
1. understand
 2. would understand
 3. will understand
 4. would have understood

Question ID : 9895805314
Chosen Option : --

Q.2

2 From the given options, identify the segment in the sentence which contains the grammatical error.

He want to finish the assignment in the last week but in fact he could not.

- Ans
- 1. he could not
 - 2. want to finish
 - 3. in the last week
 - 4. the assignment

Question ID : 9895805308
Chosen Option : --

Q.2
3 Select the word which means the same as the group of words given.

One who knows everything

- Ans
- 1. Omnipotent
 - 2. Omnipotent
 - 3. Omniscient
 - 4. Omnipresent

Question ID : 9895805328
Chosen Option : --

Q.2
4 Select the most appropriate word to fill in the blank.

The soldiers were instructed to _____ restraint and handle the situation peacefully.

- Ans
- 1. control
 - 2. resist
 - 3. exercise
 - 4. prevent

Question ID : 9895805332
Chosen Option : --

Q.2
5 Select the most appropriate option to fill in the blank.

Invite everyone in the group to _____ us for a weekend party.

- Ans
- 1. join them
 - 2. join
 - 3. join together
 - 4. join each other

Question ID : 9895805315
Chosen Option : --

Section : Hindi Language

Q.1 दिए गए शब्द के पर्यायवाची शब्द का चयन करें।

रात्रि

- Ans
- 1. गजनी

- 2. ज़ानी
- 3. रजनी
- 4. हिमानी

Question ID : 9895805632
Chosen Option : 3

Q.2 दिए गए शब्द के पर्यायवाची शब्द का चयन करें।

सरस्वती

- Ans
- 1. नेत्री
 - 2. माता
 - 3. शारदा
 - 4. देवी

Question ID : 9895805633
Chosen Option : 1

Q.3 रिक्त स्थान को भरने के लिए उपयुक्त शब्द का चयन करें।

पढ़ लो _____ सो जाओ।

- Ans
- 1. लेकिन
 - 2. या
 - 3. बल्कि
 - 4. क्योंकि

Question ID : 9895805623
Chosen Option : 2

Q.4 रिक्त स्थान को भरने के लिए उपयुक्त शब्द का चयन करें।

स्वस्थ शरीर में स्वस्थ मन का _____ होता है।

- Ans
- 1. निकास
 - 2. निवास
 - 3. अभाव
 - 4. अंधकार

Question ID : 9895805620
Chosen Option : 3

Q.5 सही वर्तनी वाले शब्द का चयन करें।

- Ans
- 1. हस्तलिखित
 - 2. हसतलिखित
 - 3. हस्तलीखित
 - 4. हस्तलिखीत

Q.6 दिए गए वाक्य में रेखांकित खंड को प्रतिस्थापित करने के लिए उपयुक्त विकल्प का चयन करें।

मैंने इन सब बातों को गहराई पर अनुभव किया।

Ans

1. बातों में गहराई की
2. बातों पर गहराई की
3. बातों को गहराई से
4. गहराई पर बातों की

Q.7 दिये गये वाक्यांश के लिए एक शब्द दीजिये।

मेहनत करने वाला

Ans

1. आलसी
2. कामचोर
3. कर्मठ
4. मेहनताना

Q.8 दिए गए वाक्य में रेखांकित खंड को प्रतिस्थापित करने के लिए उपयुक्त विकल्प का चयन करें।

जीवन के इस पड़ाव पर आकर उसके व्यवहार में ठहराव आ गई है।

Ans

1. ठहराव जा कर गया है।
2. ठहराव आए गए हैं।
3. ठहराव आ गए है।
4. ठहराव आ गया है।

Q.9 दिए गए वाक्य का वह भाग ज्ञात करें जिसमें कोई त्रुटि है।

फूलों का गुच्छा अतिथि पर सादर भेंट किया गया।

Ans

1. अतिथि पर
2. किया गया।
3. सादर भेंट
4. फूलों का गुच्छा

Q.1 रिक्त स्थान को भरने के लिए उपयुक्त शब्द का चयन करें।

इस बात से _____ क्या।

- Ans
1. मेरे से
 2. मुझे
 3. मैंने
 4. आप

Question ID : 9895805621
Chosen Option : 2

Q.1 दिए गए शब्द का विलोम चुनें।

आस्था

- Ans
1. क्षमा
 2. अनास्था
 3. प्रार्थना
 4. विराग

Question ID : 9895805630
Chosen Option : 2

Q.1 दिए गए वाक्य का वह भाग ज्ञात करें जिसमें कोई त्रुटि है।

आज मैं आपके दर्शन करके धन्यता हो गया।

- Ans
1. करके धन्यता
 2. आज मैं
 3. आपके दर्शन
 4. हो गया।

Question ID : 9895805614
Chosen Option : 1

Comprehension:

निम्नलिखित गद्यांश के रिक्त स्थानों की पूर्ति गद्यांश के नीचे दिए गए प्रश्नों के अनुसार कीजिए -

महापुरुषों ने समय को सच्चा _____ (1) माना है। वह इसलिए क्योंकि सभी मनुष्यों को अनेक प्रकार की _____ (2) समय स्वयं ही देता रहता है। मान लीजिये, किसी को ट्रेन पकड़नी है, यदि वह ठीक समय पर रेलवे स्टेशन पर _____ (3) जाएगा तभी वह _____ (4) को पकड़ सकेगा। एक क्षण की _____ (5) से ट्रेन छूट जाएगी। तब वह अवश्य ही पश्चाताप से भर कर अपने मन में सोचेगा कि काश मैं दो चार क्षण पहले ही चल देता।

SubQuestion No : 13

Q.1
3 गद्यांश में संकेतित रिक्त स्थान (1) के लिए उपयुक्त शब्द होगा -

- Ans
1. गुरु
 2. गायक
 3. शत्रु
 4. पुत्र

Question ID : 9895805625
Chosen Option : 1

Comprehension:

निम्नलिखित गद्यांश के रिक्त स्थानों की पूर्ति गद्यांश के नीचे दिए गए प्रश्नों के अनुसार कीजिए -

महापुरुषों ने समय को सच्चा _____ (1) माना है। वह इसलिए क्योंकि सभी मनुष्यों को अनेक प्रकार की _____ (2) समय स्वयं ही देता रहता है। मान लीजिये, किसी को ट्रेन पकड़नी है, यदि वह ठीक समय पर रेलवे स्टेशन पर _____ (3) जाएगा तभी वह _____ (4) को पकड़ सकेगा। एक क्षण की _____ (5) से ट्रेन छूट जाएगी। तब वह अवश्य ही पश्चाताप से भर कर अपने मन में सोचेगा कि काश मैं दो चार क्षण पहले ही चल देता।

SubQuestion No : 14

Q.1
4 गद्यांश में संकेतित रिक्त स्थान (2) के लिए उपयुक्त शब्द होगा -

- Ans
1. भोजन
 2. आकाश

3. शिक्षाएँ

4. वायु

Question ID : 9895805626
Chosen Option : 3

Comprehension:

निम्नलिखित गद्यांश के रिक्त स्थानों की पूर्ति गद्यांश के नीचे दिए गए प्रश्नों के अनुसार कीजिए -

महापुरुषों ने समय को सच्चा _____ (1) माना है। वह इसलिए क्योंकि सभी मनुष्यों को अनेक प्रकार की _____ (2) समय स्वयं ही देता रहता है। मान लीजिये, किसी को ट्रेन पकड़नी है, यदि वह ठीक समय पर रेलवे स्टेशन पर _____ (3) जाएगा तभी वह _____ (4) को पकड़ सकेगा। एक क्षण की _____ (5) से ट्रेन छूट जाएगी। तब वह अवश्य ही पश्चाताप से भर कर अपने मन में सोचेगा कि काश मैं दो चार क्षण पहले ही चल देता।

SubQuestion No : 15

Q.1
5 गद्यांश में संकेतित रिक्त स्थान (3) के लिए उपयुक्त शब्द होगा -

Ans

1. लड़ाई
2. पहुँच
3. उड़
4. लेट

Question ID : 9895805627
Chosen Option : 2

Comprehension:

निम्नलिखित गद्यांश के रिक्त स्थानों की पूर्ति गद्यांश के नीचे दिए गए प्रश्नों के अनुसार कीजिए -

महापुरुषों ने समय को सच्चा _____ (1) माना है। वह इसलिए क्योंकि सभी मनुष्यों को अनेक प्रकार की _____ (2) समय स्वयं ही देता रहता है। मान लीजिये, किसी को ट्रेन पकड़नी है, यदि वह ठीक समय पर रेलवे स्टेशन पर _____ (3) जाएगा तभी वह _____ (4) को पकड़ सकेगा। एक क्षण की _____ (5) से ट्रेन छूट जाएगी। तब वह अवश्य ही पश्चाताप से भर कर अपने मन में सोचेगा कि काश मैं दो चार क्षण पहले ही चल देता।

SubQuestion No : 16

Q.1
6 गद्यांश में संकेतित रिक्त स्थान (4) के लिए उपयुक्त शब्द होगा -

Ans

1. ट्रेन
- ✗ 2. जहाज
3. साइकिल
- ✗ 4. बस

Question ID : 9895805628
Chosen Option : 1

Comprehension:

निम्नलिखित गद्यांश के रिक्त स्थानों की पूर्ति गद्यांश के नीचे दिए गए प्रश्नों के अनुसार कीजिए -

महापुरुषों ने समय को सच्चा _____ (1) माना है। वह इसलिए क्योंकि सभी मनुष्यों को अनेक प्रकार की _____ (2) समय स्वयं ही देता रहता है। मान लीजिये, किसी को ट्रेन पकड़नी है, यदि वह ठीक समय पर रेलवे स्टेशन पर _____ (3) जाएगा तभी वह _____ (4) को पकड़ सकेगा। एक क्षण की _____ (5) से ट्रेन छूट जाएगी। तब वह अवश्य ही पश्चाताप से भर कर अपने मन में सोचेगा कि काश मैं दो चार क्षण पहले ही चल देता।

SubQuestion No : 17

Q.1
7 गद्यांश में संकेतित रिक्त स्थान (5) के लिए उपयुक्त शब्द होगा -

Ans

1. ऊँचाई
- ✗ 2. लक्ष्य

3. देरी
4. जल्दी

Question ID : 9895805629
Chosen Option : 3

Q.1
8 रिक्त स्थान को भरने के लिए उपयुक्त शब्द का चयन करें।

हम _____ साथ पूर्ण सहयोग करेंगे।

- Ans 1. आप
2. आपके
 3. हमारे
 4. अपने

Question ID : 9895805622
Chosen Option : 2

Q.1
9 दिये गये वाक्यांश के लिए एक शब्द दीजिये।

जिसका आदि न हो

- Ans 1. अमर
2. अनंत
 3. अजर
 4. अनादि

Question ID : 9895805636
Chosen Option : 4

Q.2
0 निम्नलिखित में से उस विकल्प का चयन करें जो 'दूर के ढोल सुहावने' मुहावरे का अर्थ व्यक्त करता है।

- Ans 1. दूर की वस्तुएँ अच्छे लगना
2. दूर से ढोल सुनना
 3. दूर के ढोल अच्छे लगना
 4. दूर से लोगों को देखना

Question ID : 9895805634
Chosen Option : 4

Q.2
1 सही वर्तनी वाले शब्द का चयन करें।

- Ans
1. चिकित्सालय
 2. चिकीतसालय
 3. चिकीत्सालय
 4. चीकित्सालय

Question ID : 9895805638

Q.2 दिए गए वाक्य में रेखांकित खंड को प्रतिस्थापित करने के लिए उपयुक्त विकल्प का चयन करें।

रात होने के कारण जहाँ रुके हैं, यहाँ पर डेरा डाल लेते हैं।

Ans

1. कहाँ पर डेरा डाल लेता है।
2. वहीं पर डेरा डाल लेते हैं।
3. कहीं पर डेरा डाल लेते हैं।
4. जहाँ पर डेरा डाल लेते हैं।

Question ID : 9895805617
Chosen Option : 2

Q.2 निम्नलिखित में से उस विकल्प का चयन करें जो 'दो नावों पर पैर रखना' मुहावरे का अर्थ व्यक्त करता है।

Ans

1. नदी पार करना
2. एक साथ कई काम करना
3. दो विरोधी पक्षों का आश्रय लेना
4. दो नावों पर एक साथ घूमना

Question ID : 9895805635
Chosen Option : 2

Q.2 दिए गए शब्द का विलोम चुनें।

दुर्लभ

Ans

1. अलभ
2. सुलभ
3. सज्जन
4. दुर्जन

Question ID : 9895805631
Chosen Option : 1

Q.2 दिए गए वाक्य का वह भाग ज्ञात करें जिसमें कोई त्रुटि है।

जब धन की आवश्यकता होती है तब किसी से उधार माँगने का नौबत आ जाती है।

Ans

1. उधार माँगने का नौबत आ जाती है।
2. तब किसी से
3. आवश्यकता होती है
4. जब धन की

Question ID : 9895805616
Chosen Option : 1