

## Constable (GD) in CAPFs, NIA, SSF and Rifleman (GD) in Assam Rifles Examination, 2018

Roll No. :	[REDACTED]
Registration No.	[REDACTED]
Name :	[REDACTED]
Exam Venue :	[REDACTED]
Exam Time :	9:00 AM - 10:30 AM
Exam Date :	01/03/2019

Section : General Section

**Q.1** If SQUARE is coded as TSXEWK, then TRIANGLE will be coded as \_\_\_\_\_.

- Ans
- 1. UTLESNSM
  - 2. UTLFSMSM
  - 3. UTLESMSN
  - 4. UTLESMSM

Question ID : 9895808146

Chosen Option : 1

**Q.2**

U, V, W, X, Y and Z are seated in a circle facing the centre such that each one is facing another one. X is between Z and V. V is second to the left of X and second to the right of Y. Who is facing X?

- Ans
- 1. Y
  - 2. W
  - 3. U
  - 4. Z

Question ID : 9895808147

Chosen Option : 4

**Q.3**

Select the fraction that will next in the following series.

- Ans
- $\frac{2}{3}, \frac{4}{5}, \frac{6}{7}, \frac{8}{9}, \frac{10}{11}, \frac{12}{13}, \text{---}$
- 1.  $\frac{13}{15}$
  - 2.  $\frac{13}{14}$
  - 3.  $\frac{14}{15}$
  - 4.  $\frac{14}{16}$

Question ID : 9895808152

Chosen Option : 2

**Q.4**

The statements below are followed by three conclusions labeled I, II and III. Assuming that the information in the statements is true, even if it appears to be at variance with generally established facts, decide which conclusion(s) logically and definitely follow(s) from the information given in the statements.

**Statements:**

All balls are boats.

All boats are cars.

**Conclusions:**

I. Some cars are balls.

II. All balls are cars.

III. All cars are balls.

- Ans  1. All the conclusions follow.  
 2. Only conclusion III follows.  
 3. Only conclusions I and II follow.  
 4. Only conclusions II and III follow.


Question ID : 9895808150  
Chosen Option : 1

Q.5 Select the number-pair that is different from the rest.

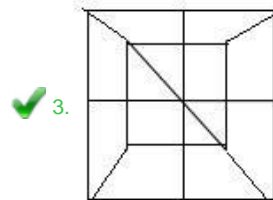
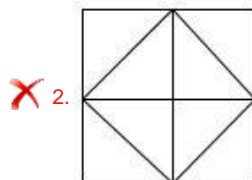
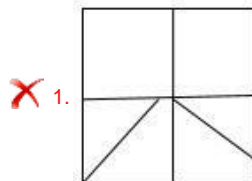
- Ans  1. 7 – 345  
 2. 5 – 125  
 3. 9 – 729  
 4. 3 – 27

Question ID : 9895808155  
Chosen Option : 2

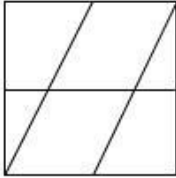
Q.6 Select the option in which the given figure is embedded.



Ans



4.



Question ID : 9895808159  
Chosen Option : 2

Q.7 Four words have been given out of which three are alike in some manner, while one is different. Choose the odd one.

- Ans  1. Volt  
 2. Power  
 3. Volume  
 4. Force

Question ID : 9895808141  
Chosen Option : 2

Q.8 Select the word-pair that is analogous to the given word-pair.

France : Paris

- Ans  1. India : Mumbai  
 2. Cuba : Havana  
 3. Iran : Rial  
 4. China : Yuan

Question ID : 9895808143  
Chosen Option : 1

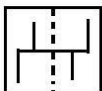
Q.9 Select the number that DOES NOT belong to the following group.

3, 6, 9, 12, 15, 18, 21, 24, 28, 30

- Ans  1. 30  
 2. 28  
 3. 15  
 4. 18

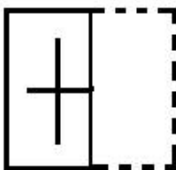
Question ID : 9895808153  
Chosen Option : 1

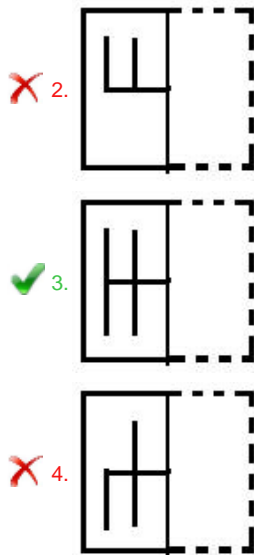
Q.1 A square transparent sheet with a pattern is given. Select from among the four alternatives how the pattern would appear when the transparent sheet is folded at the dotted line.



Ans

1.





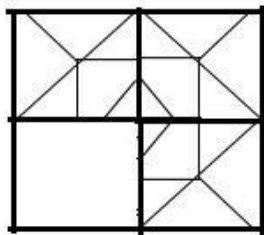
Question ID : 9895808162  
Chosen Option : 3

Q.1 Six friends, P, Q, R, S, T and U, are sitting in a closed circle facing the centre such that each one is facing another one. P is facing S. R is between P and Q. U is between P and T who is sitting right of S. Who is sitting to the immediate right of R?

- Ans
- 1. S
  - 2. T
  - 3. P
  - 4. Q

Question ID : 9895808148  
Chosen Option : 2

Q.1  
2 Select the correct option to complete the following pattern.



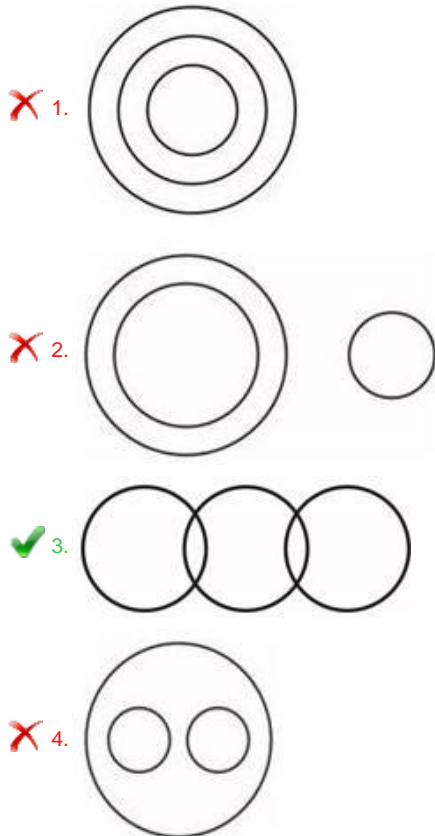
- Ans
- 1.
  - 2.
  - 3.
  - 4.

Question ID : 9895808160

Q.1  
3 Select the Venn diagram that best illustrates the relationship between the three given classes.

Flowers, Red, Clothes

Ans



Question ID : 9895808163  
Chosen Option : 1

Q.1  
4 Which two signs need to be interchanged to make the given equation correct?

$$100 \div 10 \times 100 - 10 + 100 = 910$$

- Ans
- ✓ 1. + and -
  - ✗ 2. + and ÷
  - ✗ 3. × and -
  - ✗ 4. ÷ and ×

Question ID : 9895808156  
Chosen Option : 2

Q.1  
5 Select the option that is related to the third term in the same way as the second term is related to the first term.

Where : Place :: When : \_\_\_\_\_

- Ans
- ✗ 1. Why
  - ✗ 2. There
  - ✓ 3. Time
  - ✗ 4. Then

Question ID : 9895808144  
Chosen Option : 2

Q.1  
6

Select the option that is related to the third number in the same way as the second number is related to the first number.

9 : 100 :: 13 : \_\_\_\_\_

- Ans
- 1. 130
  - 2. 169
  - 3. 144
  - 4. 196

Question ID : 9895808154  
Chosen Option : 1

Q.1 Four pairs of words have been given, out of which three are alike in some manner, while one is different. Choose out the odd one.

- Ans
- 1. Brother : Sister
  - 2. Lion : Lioness
  - 3. Cock : Hen
  - 4. Bear : Cub

Question ID : 9895808142  
Chosen Option : 1

Q.1 Choose the option that most closely resembles the mirror image of the given word when mirror is placed at right side.

8

AIM

- Ans
- 1. MIA
  - 2. WIA
  - 3. AIW
  - 4. AIM

Question ID : 9895808161  
Chosen Option : 4

Q.1 Read the given statements and conclusion carefully and decide which of the following options is true with respect to the given conclusion.

9

**Statements:**

The Gateway of India is in Mumbai.

Mumbai is in India.

**Conclusion:**

The Gateway of India is in India.

- Ans
- 1. Probably false
  - 2. True
  - 3. Probably true
  - 4. False

Question ID : 9895808151  
Chosen Option : 2

Q.2 Diya have five subjects in her academics namely A, B, C, D and E. She studies them from Monday to Friday of a week.

0

On each day, only one subject will be studied. D or E should not be either the first or last to be studied. E should be immediately followed by C. B should be studied immediately after D. One subject will be studied between A and B.

Then which subject she immediately reads after Monday?

- Ans
- 1. E
  - 2. B
  - 3. D

4. A

Question ID : 9895808149  
Chosen Option : 2

Q.2  
1 Select the term that will come in the following series.

PC, RF, TI, VL, XO, \_\_\_\_\_.

- Ans
- 1. YQ
  - 2. ZR
  - 3. YR
  - 4. ZQ

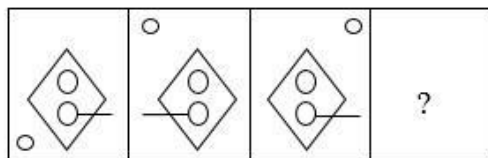
Question ID : 9895808139  
Chosen Option : 1

Q.2  
2 Identify the odd one from the following.

- Ans
- 1. HJL
  - 2. PRT
  - 3. VXZ
  - 4. CFG

Question ID : 9895808140  
Chosen Option : 2

Q.2  
3 Select the figure that will come next in the following series.



Ans

- 1.
- 2.
- 3.
- 4.



Question ID : 9895808158  
Chosen Option : 1

Q.2 In the following number series, two numbers have been put within brackets. Study the series carefully and select the correct alternative with respect to the series.

1, 1, 2, 6, 24, (121), 720, (5040), 40320

Ans  1.

The first bracketed number (from the left) is incorrect and the second is correct.

- 2. Both the bracketed numbers are incorrect.
- 3. Both the bracketed numbers are correct.
- 4.

The first bracketed number (from the left) is correct and the second is incorrect.

Question ID : 9895808157  
Chosen Option : 2

Q.2 If D = 3, G = 6, and FUN = 38, then PRESIDENT = \_\_\_\_\_.

- Ans  1. 110  
 2. 119  
 3. 100  
 4. 101

Question ID : 9895808145  
Chosen Option : 2

Q.2 The production of a commodity through natural process is an activity associated to which sector of the Indian Economy?

- Ans  1. Primary  
 2. Secondary  
 3. Quaternary  
 4. Tertiary

Question ID : 9895807212  
Chosen Option : 1

Q.2 'Theyyam' is a popular dance form of which of the following states?

- Ans  1. Kerala  
 2. Manipur  
 3. Gujarat  
 4. Karnataka

Question ID : 9895807203  
Chosen Option : 1

Q.2 Riboflavin present in fish is also known as:

- Ans  1. Vitamin K  
 2. Vitamin B2  
 3. Vitamin B12  
 4. Vitamin C



Question ID : 9895807218  
Chosen Option : 4

Q.2 'Azadirachta indica' is the botanical name of which evergreen tree found in the Indian sub-continent?  
9

- Ans
- 1. Pine tree
  - 2. Curry tree
  - 3. Hibiscus tree
  - 4. Margosa tree

Question ID : 9895807219  
Chosen Option : 1

Q.3 Which disease among the given options spreads via pigs?  
0

- Ans
- 1. Nipah
  - 2. Zika
  - 3. Plague
  - 4. Swine flu

Question ID : 9895807221  
Chosen Option : 1

Q.3 The movement of a horse drawn carriage is an example of which principle of physics?  
1

- Ans
- 1. Avogadro's law
  - 2. Newton's third law of motion
  - 3. Ohm's law
  - 4. Archimedes principle

Question ID : 9895807217  
Chosen Option : 4

Q.3 The festival of 'Hareli' is celebrated in which of the following Indian states?  
2

- Ans
- 1. Punjab
  - 2. Madhya Pradesh
  - 3. Chhattisgarh
  - 4. Odisha

Question ID : 9895807204  
Chosen Option : 1

Q.3 'Vijay Amritraj' was a legendary Indian player associated with which of the following sports?  
3

- Ans
- 1. Rifle shooting
  - 2. Lawn tennis
  - 3. Badminton
  - 4. Swimming

Question ID : 9895807206

Chosen Option : 3

Q.3  
4 Which mountain pass in the world has the highest motorable road in the world?

- Ans
1. Dhungria-La
  2. Jelep-La
  3. Nathu-La
  4. Shipki-La

Question ID : 9895807223  
Chosen Option : 4

Q.3  
5 What is India's rank in the World Bank's Human Capital Index (HCI) rankings as of Feb 2019?

- Ans
1. 104
  2. 124
  3. 115
  4. 126

Question ID : 9895807224  
Chosen Option : 1

Q.3  
6 Who is the cofounder of IndiGo Airlines?

- Ans
1. Pawan Munjal
  2. Rahul Bhatia
  3. Kiran Majumdar Shaw
  4. Y C Deveshwar

Question ID : 9895807208  
Chosen Option : 2

Q.3  
7 Which city will host the upcoming Winter Olympic Games scheduled in 2022?

- Ans
1. Paris
  2. Beijing
  3. Los Angeles
  4. Tokyo

Question ID : 9895807207  
Chosen Option : 1

Q.3  
8 As of January 2019, what is the number of articles in the Indian constitution?

- Ans
1. 431
  2. 448
  3. 402
  4. 395

Question ID : 9895807214  
Chosen Option : 3

Q.3

9

- Ans  1. Adam Smith  
 2. Milton Friedman  
 3. John Nash  
4. John Maynard Keynes

Question ID : 9895807211  
Chosen Option : 2

Q.4  
0 In which layer of the earth's atmosphere is the ozone layer found?

- Ans 1. Troposphere  
2. Stratosphere  
3. Mesosphere  
4. Exosphere

Question ID : 9895807220  
Chosen Option : 2

Q.4  
1 What was the capital of the French colony in India?

- Ans  1. Pondicherry  
 2. Cochin  
 3. Goa  
 4. Calicut

Question ID : 9895807227  
Chosen Option : 1

Q.4  
2 Which famous Indian personality is the founder of 'Paani Foundation'?

- Ans 1. Ranveer Singh  
 2. Salman Khan  
 3. Shah Rukh Khan  
 4. Amir Khan

Question ID : 9895807210  
Chosen Option : 2

Q.4  
3 With the commencement of the 7th century, who ascended the throne of Thaneshwar and Kannauj?

- Ans  1. Harshavardhana  
 2. Krishnadeva  
3. Rajendra Chola I  
4. ChandraGupta II

Question ID : 9895807225  
Chosen Option : 2

Q.4  
4 'The Legend of Laxmi Prasad' was the title of a book written by which one of the following authors?

- Ans 1.

2. Jhumpa Lahiri
3. Shobha De
4. Twinkle Khanna

Question ID : 9895807209  
Chosen Option : 2

Q.4  
5 The National Food Security Act was passed in which of the following years?

- Ans
1. 2012
  2. 2013
  3. 2011
  4. 2014

Question ID : 9895807213  
Chosen Option : 2

Q.4  
6 'Talatal Ghar' is a historical monument situated in which of the following Indian states?

- Ans
1. Assam
  2. West Bengal
  3. Sikkim
  4. Odisha

Question ID : 9895807205  
Chosen Option : 3

Q.4  
7 The Consumer Protection Bill, 2018 has replaced the Consumer Protection Act of which of the given years?

- Ans
1. 1991
  2. 1986
  3. 1981
  4. 1978

Question ID : 9895807215  
Chosen Option : 1

Q.4  
8 Which among the following is the longest river in South India?

- Ans
1. Godavari
  2. Narmada
  3. Tungabhadra
  4. Krishna

Question ID : 9895807222  
Chosen Option : 1

Q.4  
9 'Tulsidas', a poet who lived during the medieval times of Indian history, wrote 'Ramcharitmanas' in which of the following languages?

- Ans
1. Sanskrit
  2. Pali
  3. Awadhi
  4. Prakrit

Question ID : 9895807226  
Chosen Option : 1

Q.5  
0 As on 2018, which is the world's largest political party in terms of primary membership?

- Ans
1. National republican Party US
  - ✓ 2. The Bharatiya Janta Party
  3. The Democratic Party of the US
  4. The Conservative Party of UK

Question ID : 9895807216  
Chosen Option : 2

Q.5  
1 By Selling a TV for ₹8500 a person loses 15%. In order to gain of 5%, Selling price of TV should be:

- Ans
1. ₹9,000
  2. ₹10,000
  3. ₹10,500
  4. ₹9,500

Question ID : 9895807534  
Chosen Option : 1

Q.5  
2 The difference between upper limit and lower limit of the class interval is called as:

- Ans
- ✗ 1. Mode
  - ✓ 2. Class size
  3. Frequency distribution
  - ✗ 4. Range

Question ID : 9895807549  
Chosen Option : 2

Q.5  
3 If  $(x+y):(x-y) = 3:2$  then  $(x^2+y^2):(x^2-y^2)$  is in the ratio of :

- Ans
- ✗ 1. 12:13
  - ✗ 2. 5:12
  - ✗ 3. 24:5
  - ✓ 4. 13:12

Question ID : 9895807548  
Chosen Option : 2

Q.5  
4 The areas of two squares are 16:9. The ratio of their perimeter is:

- Ans
- ✗ 1. 9:16
  - ✗ 2. 12:16
  - ✓ 3. 16:12
  - ✗ 4. 9:12

Question ID : 9895807545

Q.5 Rama and Hari can together finish a piece of work in 15 day. Rama works twice as fast as Hari, then Hari alone can finish work in :

- Ans
1. 25 days
  2. 45 days
  3. 20 days
  4. 30 days

Question ID : 9895807540  
Chosen Option : 4

Q.5 The compound interest on an amount for 2 years at 5% per annum compounded annually is ₹205. The simple interest is:

- Ans
1. ₹210
  2. ₹200
  3. ₹250
  4. ₹220

Question ID : 9895807538  
Chosen Option : 1

Q.5 The Area of a rectangle is  $27 \text{ m}^2$  and its length is 3 times of its breadth. The perimeter of the rectangle is:

- Ans
1. 28cm
  2. 12cm
  3. 42cm
  4. 24cm

Question ID : 9895807544  
Chosen Option : 1

Q.5 A train is moving at 72 km/hrs. The distance covers in 15 minutes by the train is:

- Ans
1. 27 km
  2. 18 km
  3. 36 km
  4. 28 km

Question ID : 9895807541  
Chosen Option : 2

Q.5 Shopkeeper selling on article for ₹46 loses 8%. In order to gain of 6%, what should be the selling price of the article?

- Ans
1. ₹85
  2. ₹65
  3. ₹56
  4. ₹53

Question ID : 9895807533  
Chosen Option : 3



0 The value of  $30 \div 6 \times 5$  of  $(2 + 3) - 12(3 \times 2)$  is equal to:

- Ans  1. 35  
 2. 53  
 3. 82  
 4. 28

Question ID : 9895807529  
Chosen Option : 1

Q.6 In a class, the average age of 40 students is 12 years when teacher's age is included to it, the average increases by 1. The age of teacher is :

- Ans  1. 51 years  
 2. 68 years  
 3. 53 years  
 4. 48 years

Question ID : 9895807531  
Chosen Option : 4

Q.6 Study the Table Properly and answer by interpreting the data

2 The table shows the percentage population of five districts in a state below poverty line and the proportion of males and females.

District	Percentage of population below poverty line	Proportion of Male and Female	
		Below poverty line (M:F)	Above poverty line (M:F)
D1	15	2:3	3:2
D2	18	3:4	7:5
D3	20	2:5	3:4
D4	25	5:2	4:3
D5	12	3:7	2:7

If the total population in the district  $D_3$  is 40,000, then what is the population of below poverty line in the district  $D_3$  ?

- Ans  1. 10,000  
 2. 8,000  
 3. 5,000  
 4. 12,000

Question ID : 9895807551  
Chosen Option : 1

Q.6 Study the Table Properly and answer by interpreting the data

3 The table shows the percentage population of five districts in a state below poverty line and the proportion of males and females.

District	Percentage of population below poverty line	Proportion of Male and Female	
		Below poverty line (M:F)	Above poverty line (M:F)
D1	15	2:3	3:2
D2	18	3:4	7:5
D3	20	2:5	3:4
D4	25	5:2	4:3
D5	12	3:7	2:7

The total population in  $D_1$  is 30,000. The number of female under below poverty line in the district  $D_1$  is:

- Ans  1. 2500



2. 3500

3. 2700

4. 1800

Question ID : 9895807552  
Chosen Option : 2

Q.6 In how many years, a sum will be thrice of it at the rate of interest 5% per annum?  
4

Ans  1. 40 years

2. 30 years

3. 25 years

4. 20 years

Question ID : 9895807537  
Chosen Option : 4

Q.6 'A' pipe can empty a tank in 20 minutes. The second pipe 'B' has a diameter twice as that of 'A'. If both A & B pipe are  
5 attached to the tank how much time will be required to empty the tank?

Ans  1.  $10\frac{1}{2}$  minutes

2.  $6\frac{2}{3}$  minutes

3. 25 minutes

4. 15 minutes

Question ID : 9895807539  
Chosen Option : 1

Q.6 Study the Table Properly and answer by interpreting the data

6 The table shows the percentage population of five districts in a state below poverty line and the proportion of males and females.

District	Percentage of population below poverty line	Proportion of Male and Female	
		Below poverty line (M:F)	Above poverty line (M:F)
D1	15	2:3	3:2
D2	18	3:4	7:5
D3	20	2:5	3:4
D4	25	5:2	4:3
D5	12	3:7	2:7

If the total population of district D<sub>4</sub> is 35000, then what is the number of females above the poverty line in the district D<sub>4</sub>?

Ans  1. 14,240

2. 10,500

3. 11,250

4. 12,450

Question ID : 9895807550  
Chosen Option : 2

Q.6 Two numbers are less than a third number by 25 and 36 respectively. The percentage of first number less than second  
7 number is:

Ans  1. 11%

2.

3. 61%

4. 18%

Question ID : 9895807536

Chosen Option : 1

Q.6 In a university, the number of students studying science, mathematics and language are in the ratio of 2:4:9. If the number of students in Science, Mathematics and Language be increased 10%, 20% and 40% respectively. What will be the new ratio?

Ans  1. 11:24:63

2. 24:11:63

3. 12:23:63

4. 63:11:24

Question ID : 9895807546

Chosen Option : 3

Q.6 A wheel makes 4000 revolution is covering a distance of 60km. The radius of the wheel is:

Ans  1. 8m

2. 2.39 m

3. 4.68m

4. 8.25m

Question ID : 9895807543

Chosen Option : 4

Q.7 A trader allows two successive discounts of 5% each on the marked price of a sofa set for ₹24,500. The selling price of sofa set is :

Ans  1. ₹1,163.75

2. ₹22,111.25

3. ₹23,274.75

4. ₹23,275

Question ID : 9895807535

Chosen Option : 2

Q.7 The HCF and LCM of two numbers are 12 and 240 respectively. If one of the number is 24, what is the another number

Ans  1. 228

2. 144

3. 264

4. 120

Question ID : 9895807528

Chosen Option : 1

Q.7 In class IX, the average of marks in science for six students was 48. After result declared, it was found in case of one student, the marks 45 were misread as 54. The correct average is :

Ans  1. 46.40

2. 46.50

3. 76.50

4. 64.39

Question ID : 9895807532  
Chosen Option : 1

Q.7 Two numbers are 20% and 40% more than the third number respectively. The ratio of the first and second number is:  
3

- Ans
- 1. 7:5
  - 2. 7:6
  - 3. 5:7
  - 4. 6:7

Question ID : 9895807547  
Chosen Option : 1

Q.7 The distance between two stations is 500 km. A train starts from station 'A' at 9 am and travels towards station 'B' at 60 km/hrs. Another train starts from station 'B' at 10 am and travels towards 'A' at 40 km/hrs. At what time both the train meet to each other.

- Ans
- 1. 1.36 PM
  - 2. 12.45 PM
  - 3. 3.36 PM
  - 4. 2.24 PM

Question ID : 9895807542  
Chosen Option : 2

Q.7 The value of  $25 \text{ of } 4 - 30 + (2^2 + 18)$  is:

- Ans
- 1. 84
  - 2. 92
  - 3. 37
  - 4. 23

Question ID : 9895807530  
Chosen Option : 4

Section : English Language

Q.1 Select the antonym of the given word.

CONVENE

- Ans
- 1. Disperse
  - 2. Gather
  - 3. Summon
  - 4. Request

Question ID : 9895807869  
Chosen Option : 1

Q.2 Select the correctly spelt word.

- Ans
- 1. Supplementary
  - 2. Supplementery
  - 3. Suplementary

#### 4. Supplementary

Question ID : 9895807875  
Chosen Option : 3

**Q.3** Select the most appropriate option to substitute the underlined segment in the given sentence. If there is no need to substitute it, select No improvement.

Those who are travelling today by train may have delayed in reaching their destinations.

- Ans**
1. travelling today by train may get delayed
  2. travel today by train may get delayed
  3. travelling today in train may get delayed
  4. No improvement

Question ID : 9895807858  
Chosen Option : 2

**Comprehension:**

In the following passage some words have been deleted. Fill in the blanks with the help of the alternatives given.

"Success begins in the mind." This is a wonderful quote to explain the power of having (1) \_\_\_\_\_ in yourself. Since (2) \_\_\_\_\_ wants success, they all try their best. Sometimes they will (3) \_\_\_\_\_ failure, but that's what life is. Ups and downs are a part of it. All you need is to take that failure in your (4) \_\_\_\_\_ learn from it and never forget it. It doesn't matter how or where you come from, success happens to those who (5) \_\_\_\_\_ hands with difficulties.

**SubQuestion No : 4**

**Q.4** Select the most appropriate option that will fill in the blank number 1.

- Ans**
1. disgust
  2. doubt
  3. faith
  4. discard

Question ID : 9895807862  
Chosen Option : 2

**Comprehension:**

In the following passage some words have been deleted. Fill in the blanks with the help of the alternatives given.

"Success begins in the mind." This is a wonderful quote to explain the power of having (1) \_\_\_\_\_ in yourself. Since (2) \_\_\_\_\_ wants success, they all try their best. Sometimes they will (3) \_\_\_\_\_ failure, but that's what life is. Ups and downs are a part of it. All you need is to take that failure in your (4) \_\_\_\_\_ learn from it and never forget it. It doesn't matter how or where you come from, success happens to those who (5) \_\_\_\_\_ hands with difficulties.

SubQuestion No : 5

Q.5 Select the most appropriate option that will fill in the blank number 2.

- Ans
- 1. someone
  - 2. each
  - 3. everyone
  - 4. anyone

Question ID : 9895807863  
Chosen Option : 3

Comprehension:

In the following passage some words have been deleted. Fill in the blanks with the help of the alternatives given.

"Success begins in the mind." This is a wonderful quote to explain the power of having (1) \_\_\_\_\_ in yourself. Since (2) \_\_\_\_\_ wants success, they all try their best. Sometimes they will (3) \_\_\_\_\_ failure, but that's what life is. Ups and downs are a part of it. All you need is to take that failure in your (4) \_\_\_\_\_ learn from it and never forget it. It doesn't matter how or where you come from, success happens to those who (5) \_\_\_\_\_ hands with difficulties.

SubQuestion No : 6

Q.6

Select the most appropriate option that will fill in the blank number 3.

- Ans
- 1. clash
  - 2. encounter
  - 3. see
  - 4. oppose

Question ID : 9895807864  
Chosen Option : 1

Comprehension:

In the following passage some words have been deleted. Fill in the blanks with the help of the alternatives given.

"Success begins in the mind." This is a wonderful quote to explain the power of having (1) \_\_\_\_\_ in yourself. Since (2) \_\_\_\_\_ wants success, they all try their best. Sometimes they will (3) \_\_\_\_\_ failure, but that's what life is. Ups and downs are a part of it. All you need is to take that failure in your (4) \_\_\_\_\_ learn from it and never forget it. It doesn't matter how or where you come from, success happens to those who (5) \_\_\_\_\_ hands with difficulties.

SubQuestion No : 7

Q.7 Select the most appropriate option that will fill in the blank number 4.

- Ans
- 1. run
  - 2. stride
  - 3. walk
  - 4. wing

Question ID : 9895807865  
Chosen Option : 3

Comprehension:



In the following passage some words have been deleted. Fill in the blanks with the help of the alternatives given.

"Success begins in the mind." This is a wonderful quote to explain the power of having (1) \_\_\_\_\_ in yourself. Since (2) \_\_\_\_\_ wants success, they all try their best. Sometimes they will (3) \_\_\_\_\_ failure, but that's what life is. Ups and downs are a part of it. All you need is to take that failure in your (4) \_\_\_\_\_ learn from it and never forget it. It doesn't matter how or where you come from, success happens to those who (5) \_\_\_\_\_ hands with difficulties.

SubQuestion No : 8

Q.8 Select the most appropriate option that will fill in the blank number 5.

- Ans
- 1. move
  - 2. avoid
  - 3. see
  - 4. shake

Question ID : 9895807866  
Chosen Option : 4

Q.9 Select the most appropriate option to fill in the blank.

Whenever he refers to his friends he is pleased but when he talks of his foes he is \_\_\_\_\_.

- Ans
- 1. serene
  - 2. possessed
  - 3. interested
  - 4. unhappy

Question ID : 9895807860  
Chosen Option : 3

Q.10 Select the word which means the same as the group of words given.

A person who is indifferent to the pains and pleasures of life.

- Ans
- 1. Solitary
  - 2. Stoic
  - 3. Introvert
  - 4. Social



Q.1  
1 Select the synonym of the given word.

AFFINITY

- Ans
- 1. Decency
  - 2. Empathy
  - 3. Beauty
  - 4. Monotony

Q.1  
2 Select the most appropriate word to fill in the blank.

You can master anything by the usual process of learning and practicing it \_\_\_\_\_.

- Ans
- 1. regularly
  - 2. occasionally
  - 3. annually
  - 4. temporarily

Q.1  
3 Select the most appropriate option to substitute the underlined segment in the given sentence. If there is no need to substitute it, select No improvement.

On the academic front you are likely to outshine others and take up a better career.

- Ans
- 1. you should likely to outshine others
  - 2. you were likely to outshine others
  - 3. you are likely for outshine other
  - 4. No improvement

Q.1  
4 Select the most appropriate option to fill in the blank.

My forefinger is still \_\_\_\_\_ where I caught it in the door this morning.

- Ans
- 1. damaged
  - 2. scorched
  - 3. bruised
  - 4. burnt

Q.1

5 Select the most appropriate word to fill in the blank.

Your parents may get \_\_\_\_\_ with your lifestyle and demand a change in it.

- Ans
- 1. pleased
  - ✓ 2. annoyed
  - ✗ 3. satisfied
  - ✗ 4. fulfilled

Question ID : 9895807878  
Chosen Option : 3

Q.1  
6 Select the synonym of the given word.

CUMBERSOME

- Ans
- ✗ 1. Graceful
  - ✓ 2. Heavy
  - ✗ 3. Virtuous
  - ✗ 4. Wonderful

Question ID : 9895807868  
Chosen Option : 1

Q.1  
7 Select the option that means the same as the given idiom.

Call it a day

- Ans
- 1. Disagreeing on everything someone is saying
  - 2. Agreeing to reveal some secret information
  - 3. Attempting to do an impossible task
  - 4. Decide or agree to stop doing something

Question ID : 9895807871  
Chosen Option : 3

Q.1  
8 Select the correctly spelt word.

- Ans
- ✗ 1. Bugett
  - ✗ 2. Budjet
  - 3. Badjet
  - 4. Budget

Question ID : 9895807876  
Chosen Option : 2

Q.1  
9 Select the word which means the same as the group of words given.

One who does a thing for pleasure and not as a profession

- Ans
- ✓ 1.

2. Sportsperson

3. Volunteer

4. Athlete

Question ID : 9895807873  
Chosen Option : 2

Q.2  
0 Select the antonym of the given word.

CONCUR

Ans  1. Lead

2. Contribute

3. Distribute

4. Disagree

Question ID : 9895807870  
Chosen Option : 3

Q.2  
1 From the given options, identify the segment in the sentence which contains the grammatical error.

You are invite to build a better community by planting a seed of peace within and a tree outside.

Ans  1. You are invite to

2. by planting a seed of peace

3. within and a tree outside

4. build a better community

Question ID : 9895807853  
Chosen Option : 1

Q.2  
2 Select the option that means the same as the given idiom.

To hang together

Ans  1. to take a swing in a garden

2. To be connected with each other

3. To keep holding on to something

4. To be over telephone with a friend

Question ID : 9895807872  
Chosen Option : 1

Q.2  
3 Select the most appropriate option to substitute the underlined segment in the given sentence. If there is no need to substitute it, select No improvement.

Statistical measure which track the money-saving behaviour haven't improved much.

Ans  1. No improvement

2. measures which track the money-saving behaviour


3. measure which tracks money-saving behaviours

4. measures what track the money-saving behaviour

Question ID : 9895807856  
Chosen Option : 1

Q.2 From the given options, identify the segment in the sentence which contains the grammatical error.  
4

While we would like all Indian children to go to school, we need to ponder why they does not.

- Ans  1. While we would like  
2. Indian children to go to school  
3. why they does not  
4. we need to ponder

Question ID : 9895807854  
Chosen Option : 2

Q.2 From the given options, identify the segment in the sentence which contains the grammatical error.  
5

In India, the various practices and norms from bank's transactions are laid down by the RBI only.

- Ans  1. are laid down  
2. by the RBI only  
 3. norms from bank's transactions  
4. the various practices

Question ID : 9895807855  
Chosen Option : 3

Section : Hindi Language



Q.1 निम्नलिखित में से उस विकल्प का चयन करें जो 'जान हथेली पर रखना' मुहावरे का अर्थ व्यक्त करता है।

- Ans 1. जान कीमती होना  
2. जीवन को संकट में डालना  
3. जान को हथेली के उपर रखना  
4. सुविधाजनक कार्य करना

Question ID : 9895806652  
Chosen Option : --

Q.2 दिए गए वाक्य में रेखांकित खंड को प्रतिस्थापित करने के लिए उपयुक्त विकल्प का चयन करें।

सीता के लव और कुश दो बेटे थे।

- Ans  1. तनय  
 2. वत्सला  
3. प्यारे  
 4. तनया

Question ID : 9895806635  
Chosen Option : --

Q.3 दिए गए वाक्य में रेखांकित खंड को प्रतिस्थापित करने के लिए उपयुक्त विकल्प का चयन करें।

सचिव ने अध्यक्ष के गले में फूलों की एक माला डाली।

- Ans  1. समन्वयक  
2. निर्देशक  
3. सभापति  
4. मंत्री

Question ID : 9895806634  
Chosen Option : --

Q.4 रिक्त स्थान को भरने के लिए उपयुक्त शब्द का चयन करें।

चोर के पीछे पुलिस भागी \_\_\_\_\_ उसे पकड़ नहीं पाई।

- Ans  1. अभी  
 2. या  
3. परंतु  
 4. अन्यथा

Question ID : 9895806639  
Chosen Option : --

Q.5 निम्नलिखित में से उस विकल्प का चयन करें जो 'फूँक-फूँक कर कदम रखना' मुहावरे का अर्थ व्यक्त करता है।

- Ans  1. फूँक मार कर कदम बढ़ाना  
2. आवेग में काम करना  
3. तनिक भी अच्छा न लगना  
4. सोच समझ कर काम करना

Question ID : 9895806651  
Chosen Option : --

Q.6 दिए गए वाक्य का वह भाग ज्ञात करें जिसमें कोई त्रुटि है।

आप सायं मेरे घर अवश्य आएँ मैं तुम लोगों को कुछ कीमती पुस्तकें भेंट करूँगा।

- Ans  1. कुछ कीमती पुस्तकें भेंट करूँगा।  
2. आप सायं  
3. मैं तुम लोगों को  
4. मेरे घर अवश्य आएँ

Question ID : 9895806633  
Chosen Option : --

Q.7 दिए गए वाक्य में रेखांकित खंड को प्रतिस्थापित करने के लिए उपयुक्त विकल्प का चयन करें।

तुम्हारी बातों का कोई प्रमाण नहीं है।

- Ans  1. उदाहरण  
 2. साक्ष्य  
 3. सत्य



✓ 4. तर्क

Question ID : 9895806636  
Chosen Option : --

Q.8 दिये गये वाक्यांश के लिए एक शब्द दीजिये।

जिसे जीता न जा सके

Ans

1. अजेय
- ✗ 2. अजर
3. अविस्मरणीय
4. अनंत

Question ID : 9895806654  
Chosen Option : --

Q.9 दिए गए शब्द का विलोम चुनें।

व्योम

Ans

- ✓ 1. आकाश
- ✗ 2. धरा
- ✗ 3. राजा
4. पक्षी

Question ID : 9895806647  
Chosen Option : --

Q.1 दिए गए वाक्य का वह भाग ज्ञात करें जिसमें कोई वुटि है।

0

पहले दो दिन तो सुधा ने कृष्णा को सामने से गुजरते देखा था लेकिन वह तो तड़के ही निकल जाता था।

Ans

1. लेकिन वह तो तड़के ही
2. निकल जाता था।
3. पहले दो दिन तो सुधा ने
4. कृष्णा को सामने से गुजरते देखा था

Question ID : 9895806631  
Chosen Option : --

Q.1 दिए गए शब्द के पर्यायवाची शब्द का चयन करें।

1

स्वर्ण

Ans

1. करी
2. सुमन
3. नीरद
4. कंचन

Question ID : 9895806650

Q.1  
2 दिए गए शब्द के पर्यायवाची शब्द का चयन करें।

महादेव

- Ans  1. ब्रह्मा  
 2. विष्णु  
 3. शंकर  
 4. कृष्ण

Question ID : 9895806649  
Chosen Option : --

Q.1  
3 रिक्त स्थान को भरने के लिए उपयुक्त शब्द का चयन करें।

माँ ने डाँटकर मुझसे \_\_\_\_\_।

- Ans  1. खाया  
 2. नाचा  
 3. पूछा  
 4. भागा

Question ID : 9895806637  
Chosen Option : --

Comprehension:

निम्नलिखित गद्यांश के रिक्त स्थानों की पूर्ति गद्यांश के नीचे दिए गए प्रश्नों के अनुसार कीजिए -

नैतिक मूल्यों के माध्यम से राष्ट्र निर्माण की शिक्षा देना शिक्षा व्यवस्था का प्रथम एवं महत्वपूर्ण \_\_\_\_\_(1) है। निर्माण शब्द का शाब्दिक अर्थ है किसी रचना को बनाने के लिए एक खाका तैयार करना, आवश्यक \_\_\_\_\_(2) जुटाना और कठिन परिश्रम के साथ खाके के अनुसार संरचना तैयार करना। इसी प्रक्रिया में समय लगता है, धैर्य, प्रतीक्षा और \_\_\_\_\_(3) की आवश्यकता होती है। शिक्षा राष्ट्र निर्माण का एक उपक्रम है, जिसके माध्यम से हम अधिकतम \_\_\_\_\_(4) तक निर्माण कर सकते हैं, बशर्ते कि इसके लिए हमारे प्रयास और \_\_\_\_\_(5) मजबूत हों। दूरदृष्टि और नियोजन के बिना रचनात्मक युवा मस्तिष्कों में राष्ट्रनिर्माण का बीज नहीं डाला जा सकता।

SubQuestion No : 14

Q.1  
4 गद्यांश में संकेतित रिक्त स्थान (1) के लिए उपयुक्त शब्द होगा

- Ans 1. दायित्व



2. उपदेश
- ✗ 3. कदम
- ✗ 4. साहस

Question ID : 9895806642  
Chosen Option : --

Comprehension:

निम्नलिखित गद्यांश के रिक्त स्थानों की पूर्ति गद्यांश के नीचे दिए गए प्रश्नों के अनुसार कीजिए -

नैतिक मूल्यों के माध्यम से राष्ट्र निर्माण की शिक्षा देना शिक्षा व्यवस्था का प्रथम एवं महत्वपूर्ण \_\_\_\_\_ (1) है। निर्माण शब्द का शाब्दिक अर्थ है किसी रचना को बनाने के लिए एक खाका तैयार करना, आवश्यक \_\_\_\_\_ (2) जुटाना और कठिन परिश्रम के साथ खाके के अनुसार संरचना तैयार करना। इसी प्रक्रिया में समय लगता है, धैर्य, प्रतीक्षा और \_\_\_\_\_ (3) की आवश्यकता होती है। शिक्षा राष्ट्र निर्माण का एक उपक्रम है, जिसके माध्यम से हम अधिकतम \_\_\_\_\_ (4) तक निर्माण कर सकते हैं, बशर्ते कि इसके लिए हमारे प्रयास और \_\_\_\_\_ (5) मजबूत हों। दूरदृष्टि और नियोजन के बिना रचनात्मक युवा मस्तिष्कों में राष्ट्रनिर्माण का बीज नहीं डाला जा सकता।

SubQuestion No : 15

Q.1  
5 गद्यांश में संकेतित रिक्त स्थान (2) के लिए उपयुक्त शब्द होगा

- Ans
1. मनुष्य
  2. भीड़
  3. संसाधक
  4. संसाधन

Question ID : 9895806643  
Chosen Option : --

Comprehension:

निम्नलिखित गद्यांश के रिक्त स्थानों की पूर्ति गद्यांश के नीचे दिए गए प्रश्नों के अनुसार कीजिए -

नैतिक मूल्यों के माध्यम से राष्ट्र निर्माण की शिक्षा देना शिक्षा व्यवस्था का प्रथम एवं महत्वपूर्ण \_\_\_\_\_(1) है। निर्माण शब्द का शाब्दिक अर्थ है किसी रचना को बनाने के लिए एक खाका तैयार करना, आवश्यक \_\_\_\_\_(2) जुटाना और कठिन परिश्रम के साथ खाके के अनुसार संरचना तैयार करना। इसी प्रक्रिया में समय लगता है, धैर्य, प्रतीक्षा और \_\_\_\_\_(3) की आवश्यकता होती है। शिक्षा राष्ट्र निर्माण का एक उपक्रम है, जिसके माध्यम से हम अधिकतम \_\_\_\_\_(4) तक निर्माण कर सकते हैं, बशर्ते कि इसके लिए हमारे प्रयास और \_\_\_\_\_(5) मजबूत हों। दूरदृष्टि और नियोजन के बिना रचनात्मक युवा मस्तिष्कों में राष्ट्रनिर्माण का बीज नहीं डाला जा सकता।

SubQuestion No : 16

Q.1  
6 गद्यांश में संकेतित रिक्त स्थान (3) के लिए उपयुक्त शब्द होगा

- Ans
1. काल
  2. सामग्री
  3. समय
  4. परिश्रम

Question ID : 9895806644  
Chosen Option : --

Comprehension:

निम्नलिखित गद्यांश के रिक्त स्थानों की पूर्ति गद्यांश के नीचे दिए गए प्रश्नों के अनुसार कीजिए -

नैतिक मूल्यों के माध्यम से राष्ट्र निर्माण की शिक्षा देना शिक्षा व्यवस्था का प्रथम एवं महत्वपूर्ण \_\_\_\_\_(1) है। निर्माण शब्द का शाब्दिक अर्थ है किसी रचना को बनाने के लिए एक खाका तैयार करना, आवश्यक \_\_\_\_\_(2) जुटाना और कठिन परिश्रम के साथ खाके के अनुसार संरचना तैयार करना। इसी प्रक्रिया में समय लगता है, धैर्य, प्रतीक्षा और \_\_\_\_\_(3) की आवश्यकता होती है। शिक्षा राष्ट्र निर्माण का एक उपक्रम है, जिसके माध्यम से हम अधिकतम \_\_\_\_\_(4) तक निर्माण कर सकते हैं, बशर्ते कि इसके लिए हमारे प्रयास और \_\_\_\_\_(5) मजबूत हों। दूरदृष्टि और नियोजन के बिना रचनात्मक युवा मस्तिष्कों में राष्ट्रनिर्माण का बीज नहीं डाला जा सकता।

SubQuestion No : 17

Q.1  
7 गद्यांश में संकेतित रिक्त स्थान (4) के लिए उपयुक्त शब्द होगा

- Ans
1. सामर्थ्य
  2. बुद्धि
  3. भावना
  4. बल

Question ID : 9895806645  
Chosen Option : --

Comprehension:

निम्नलिखित गद्यांश के रिक्त स्थानों की पूर्ति गद्यांश के नीचे दिए गए प्रश्नों के अनुसार कीजिए -

नैतिक मूल्यों के माध्यम से राष्ट्र निर्माण की शिक्षा देना शिक्षा व्यवस्था का प्रथम एवं महत्वपूर्ण \_\_\_\_\_ (1) है। निर्माण शब्द का शाब्दिक अर्थ है किसी रचना को बनाने के लिए एक खाका तैयार करना, आवश्यक \_\_\_\_\_ (2) जुटाना और कठिन परिश्रम के साथ खाके के अनुसार संरचना तैयार करना। इसी प्रक्रिया में समय लगता है, धैर्य, प्रतीक्षा और \_\_\_\_\_ (3) की आवश्यकता होती है। शिक्षा राष्ट्र निर्माण का एक उपक्रम है, जिसके माध्यम से हम अधिकतम \_\_\_\_\_ (4) तक निर्माण कर सकते हैं, बशर्ते कि इसके लिए हमारे प्रयास और \_\_\_\_\_ (5) मजबूत हों। दूरदृष्टि और नियोजन के बिना रचनात्मक युवा मस्तिष्कों में राष्ट्रनिर्माण का बीज नहीं डाला जा सकता।

SubQuestion No : 18

Q.1  
8 गद्यांश में संकेतित रिक्त स्थान (5) के लिए उपयुक्त शब्द होगा

- Ans
1. कल्पना
  2. महत्वाकांक्षा
  3. सपना
  4. इच्छाशक्ति

Question ID : 9895806646  
Chosen Option : --

Q.1  
9 दिए गए वाक्य का वह भाग जात करें जिसमें कोई त्रुटि है।

मैंने राम को सभी महत्वपूर्ण प्रश्नों के उत्तर बताए परन्तु उसे कुछ समझ में न आया।

- Ans
1. उत्तर बताए परन्तु
  2. सभी महत्वपूर्ण प्रश्नों के

✗ 3. उसे कुछ समझ में न आया।

4. मैंने राम को

Question ID : 9895806632  
Chosen Option : --

Q.2  
0 रिक्त स्थान को भरने के लिए उपयुक्त शब्द का चयन करें।

किसी ने दरवाजा \_\_\_\_\_ है।

- Ans
- ✗ 1. फड़फड़ाया
  - ✓ 2. खटखटाया
  - ✗ 3. हनहनाया
  - 4. बिलबिलाया

Question ID : 9895806638  
Chosen Option : --

Q.2  
1 सही वर्तनी वाले शब्द का चयन करें।

- Ans
- 1. विध्वांस
  - 2. वीध्वांस
  - 3. विध्वंस
  - 4. विधवंस

Question ID : 9895806655  
Chosen Option : --

Q.2  
2 सही वर्तनी वाले शब्द का चयन करें।

- Ans
- 1. श्रद्धालू
  - 2. श्रद्धलु
  - 3. शर्धालू
  - 4. श्रद्धालु

Question ID : 9895806656  
Chosen Option : --

Q.2  
3 दिए गए शब्द का विलोम चुनें।

सामान्य

- Ans
- ✓ 1. आम
  - 2. विशेष
  - 3. सामने
  - ✗ 4. अन्य

Question ID : 9895806648  
Chosen Option : --



Q.2  
4 रिक्त स्थान को भरने के लिए उपयुक्त शब्द का चयन करें।

\_\_\_\_\_ विद्यार्थियों को पढ़ाता है।

Ans

1. वकील
- ✓ 2. बागवान
3. अभियंता
- ✗ 4. अध्यापक

Question ID : 9895806640  
Chosen Option : --

Q.2  
5 दिये गये वाक्यांश के लिए एक शब्द दीजिये।

जिसे भुलाया न जा सके

Ans

1. अविस्मरणीय
2. अज्ञेय
3. विस्मरणीय
4. भूलनीय

Question ID : 9895806653  
Chosen Option : --

## Constable (GD) in CAPFs, NIA, SSF and Rifleman (GD) in Assam Rifles Examination, 2018

Roll No. :	
Registration No.	
Name :	
Exam Venue :	iON Digital Zone iDZ Kanti
Exam Time :	12:30 PM - 2:00 PM
Exam Date :	01/03/2019

Section : General Section

**Q.1** Select the option that is related to the third term in the same way as the second term is related to the first term.

Man : Mammal :: Butterfly : \_\_\_\_\_

- Ans**
- 1. Caterpillar
  - 2. Insect
  - 3. Bird
  - 4. Reptile

Question ID : 9895808169

Chosen Option : 1

**Q.2**

Select the option that is related to the third term in the same way as the second term is related to the first term.

KN :  $\frac{121}{196}$  :: RU : \_\_\_\_\_

- Ans**
- 1.  $\frac{256}{400}$
  - 2.  $\frac{256}{196}$
  - 3.  $\frac{324}{144}$
  - 4.  $\frac{324}{441}$

Question ID : 9895808179

Chosen Option : 2

**Q.3** If SCIENCE is coded as 14 and MATHS is coded as 10, then what will be the code for EXAMINATION?

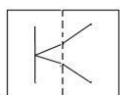
- Ans**
- 1. 21
  - 2. 22
  - 3. 11
  - 4. 23

Question ID : 9895808170

Chosen Option : 4

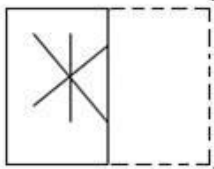
**Q.4**

A square transparent sheet with a pattern is given. Select from among the four alternatives how the pattern would appear when the transparent sheet is folded at the dotted line.

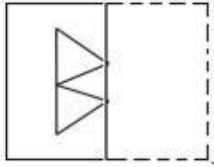


**Ans**

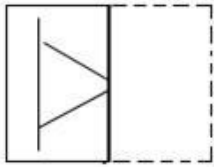
✗ 1.



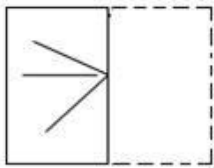
✓ 2.



✗ 3.



✗ 4.



Question ID : 9895808187  
Chosen Option : 1

Q.5 Select the number-pair that is different from the rest.

- Ans
- ✗ 1. 7 – 49
  - ✗ 2. 16 – 256
  - ✗ 3. 12 – 144
  - ✓ 4. 13 – 196

Question ID : 9895808180  
Chosen Option : 4

Q.6 Six friends, Anitha, Punitha, Chithra, Deepthi, Harini and Vani, are sitting in a field. Anitha and Punitha are from the Green house, whereas the rest belong to the Red house. Deepthi and Vani are tall, whereas the others are short. Anitha, Chithra and Deepthi are wearing saris, whereas the others are wearing frocks.

Who among them is tall and from the Red house but not wearing a sari?

- Ans
- 1. Deepthi
  - ✗ 2. Anitha
  - ✓ 3. Vani
  - ✗ 4. Chithra

Question ID : 9895808174  
Chosen Option : 3

Q.7 Read the given statements and conclusion carefully and decide which of the following options is true with respect to the given conclusion.

Statements:

Men who are handsome are generally of the intellectual type.

Vikram is handsome.

Conclusion:

Vikram is intellectual.

- Ans
- 1.



2. Probably true

3. True

4. False

Question ID : 9895808176  
Chosen Option : 3

Q.8 Which two signs/numbers need to be interchanged to make the given equation correct?

$$8 \div 2 + 4 = 10$$

Ans  1.  $\div$  and  $+$ , 8 and 4

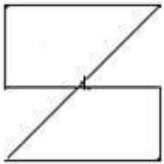
2.  $\div$  and  $+$

3.  $+$  and  $\div$ , 8 and 2

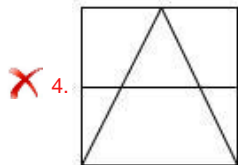
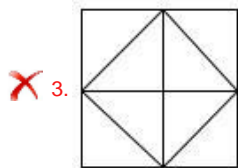
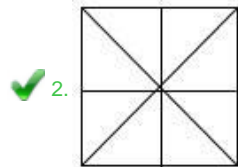
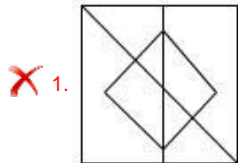
4.  $+$  and  $\div$ , 2 and 4

Question ID : 9895808181  
Chosen Option : 3

Q.9 Select the option in which the given figure is embedded.



Ans



Question ID : 9895808184  
Chosen Option : 3

Q.1 Choose the option that most closely resembles the mirror image of the given word when mirror is placed at right side.

0  
NATION

Ans  1. NOITAI

2. IATION

3. NOITAN

Question ID : 9895808186  
Chosen Option : 1

**Q.1** The statements below are followed by two conclusions labeled I and II. Assuming that the information in the statements is true, even if it appears to be at variance with generally established facts, decide which conclusion(s) logically and definitely follow(s) from the information given in the statements.

**Statements:**

Some girls are women.

No woman is brown.

**Conclusions:**

- I. Some girls are not brown.
- II. Some women are girls.

- Ans**
- 1. Only conclusion II follows.
  - 2. Only conclusion I follows.
  - 3. Both conclusions I and II follow.
  - 4. Neither conclusion I nor II follows.

Question ID : 9895808175  
Chosen Option : 2

**Q.1** Seven friends — Ajith, Bala, Hari, David, Raja, Sekar and Guna — are sitting around a circular table. David is not the neighbour of Hari and Raja. Ajith is the neighbour of Bala and Hari. Guna, who is second to the left of David, is the neighbour of Sekar and Raja.

What is the position of Hari?

- Ans**
- 1. To the immediate left of Ajith
  - 2. To the immediate right of Raja
  - 3. Third to the left of Sekar
  - 4. Second to the left of Bala

Question ID : 9895808172  
Chosen Option : 2

**Q.1** Select the number that will come next in the following series.

1, 5, 9, 17, 25, 37, 49, 65, 81, \_\_\_\_\_

- Ans**
- 1. 99
  - 2. 110
  - 3. 100
  - 4. 101

Question ID : 9895808177  
Chosen Option : 4

**Q.1** Four words have been given out of which three are alike in some manner, while one is different. Choose the odd one.

- Ans**
- 1. Cub
  - 2. Sty
  - 3. Hive
  - 4. Kennel

Q.1  
5 Select the word-pair that is analogous to the given word-pair.

Bird : Fly

- Ans
- 1. Cat : Kitten
  - 2. Fox : Vixen
  - 3. Cattle : Herd
  - 4. Horse : Gallop

Q.1  
6 Select the number that DOES NOT belong to the following group.

1, 2, 6, 21, 88, 446, 2676



- Ans
- 1. 6
  - 2. 446
  - 3. 21
  - 4. 88

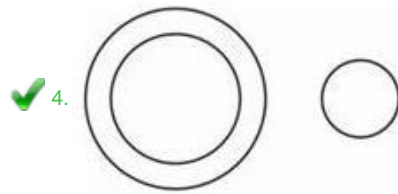
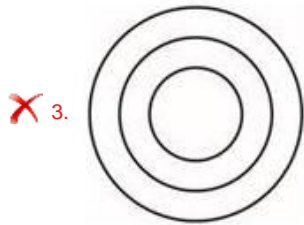
Q.1  
7 Seven students are standing in a row. B is standing to the left of C and to the right of A. D is standing to the right of E and to the left of A. F is standing to the right of C and to the left of G. Who is standing in the middle?

- Ans
- 1. F
  - 2. D
  - 3. G
  - 4. B

Q.1  
8 Select the Venn diagram that best illustrates the relationship between the three given classes.

Carrot, Vegetables, Meat

- Ans
- 1. 
  - 2. 



Question ID : 9895808188  
Chosen Option : 2

Q.1 In the following fraction series, two fractions have been put within brackets. Study the series carefully and select the correct alternative with respect to the series.

$$\frac{2}{\sqrt{5}} + \frac{4}{5} + \frac{6}{5\sqrt{5}} + \left(\frac{8}{125}\right) + \frac{10}{25\sqrt{5}} + \frac{12}{125} + \left(\frac{14}{125\sqrt{5}}\right)$$

Ans  1. Both the bracketed fractions are incorrect.

2.

The first bracketed fraction (from the left) is correct and the second is incorrect.

3.

The first bracketed fraction (from the left) is incorrect and the second is correct.

4. Both the bracketed fractions are correct.

Question ID : 9895808182  
Chosen Option : 1

Q.2 Select the term that will come next in the following series.

BMO, EOQ, HQS, KSU, \_\_\_\_\_.

Ans  1. MTV

2. NUW

3. NTV

4. NVW

Question ID : 9895808164  
Chosen Option : 1

Q.2 Identify the odd one from the following.

Ans  1. kmn

2. prt

3. bdf

4. suw

Question ID : 9895808165  
Chosen Option : 1

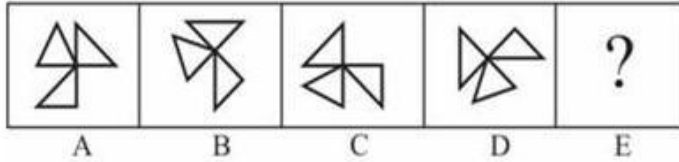
Q.2 Four pairs of words have been given, out of which three are alike in some manner, while one is different. Choose out the odd one.

Ans 1.

- ✓ 2. Wind : Taseometer
- ✗ 3. Current : Ammeter
- 4. Humidity : Hygrometer

Question ID : 9895808167  
Chosen Option : 1

Q.2  
3 Select the figure that will come next in the following series.



Ans

- ✗ 1.
- ✗ 2.
- ✗ 3.
- ✓ 4.

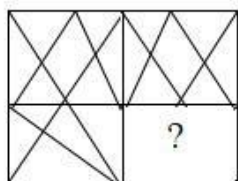
Question ID : 9895808183  
Chosen Option : 3

Q.2  
4 If E is denoted by F, D is denoted by B, R is denoted by K, U is denoted by V, T is denoted by I, A is denoted by C, G is denoted by X and H is denoted by W, then how will the word DAUGHTER be written?

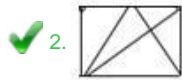
- Ans
- ✗ 1. BCWXVIFK
  - ✗ 2. BCWXWFIK
  - ✗ 3. BCVXWIKF
  - ✓ 4. BCVXWIFK

Question ID : 9895808171  
Chosen Option : 4

Q.2  
5 Select the correct option to complete the following pattern.



- Ans
- ✗ 1.



Question ID : 9895808185  
Chosen Option : 3

Q.2  
6 Which of the following is a contagious disease?

- Ans  1. Diabetes  
 2. Stroke  
 3. Tuberculosis  
 4. Asthma

Question ID : 9895807246  
Chosen Option : 2

Q.2  
7 In which year was the constitution of Jammu and Kashmir adopted?

- Ans  1. 1954  
 2. 1950  
 3. 1956  
 4. 1958

Question ID : 9895807239  
Chosen Option : 3

Q.2  
8 A group of fish is called a:

- Ans  1. school  
 2. army  
 3. standard  
 4. bus

Question ID : 9895807244  
Chosen Option : 2

Q.2  
9 Inspired by the constitution of which of the given nations has India added the feature of 'Directive Principles' in its constitution?

- Ans  1. USA  
 2. Germany  
 3. Ireland  
 4. Russia

Question ID : 9895807241  
Chosen Option : 4

Q.3  
0 On which day is the World Population Day celebrated?

- Ans  1.



2. 15<sup>th</sup> August
3. 5<sup>th</sup> September
4. 11<sup>th</sup> July

Question ID : 9895807249  
Chosen Option : 1

Q.3 What was the approximate distance that Mahatma Gandhi marched for the Salt Satyagraha Movement?

1

- Ans
1. 241 miles
  2. 350 miles
  3. 400 miles
  4. 123 miles

Question ID : 9895807252  
Chosen Option : 3

Q.3 The Bretton Woods Agreement led to the creation of which one of the following institutions?

2

- Ans
1. United Nations
  2. United Nations Educational, Scientific and Cultural Organization
  3. International Monetary Fund
  4. International Labour Organization

Question ID : 9895807237  
Chosen Option : 1

Q.3 What is the national sport of China?

3

- Ans
1. Cricket
  2. Football
  3. Rugby
  4. Table Tennis

Question ID : 9895807232  
Chosen Option : 3

Q.3 What is the first age in the prehistoric period called?

4

- Ans
1. Palaeolithic age
  2. Metal age
  3. Copper age
  4. Neolithic age

Question ID : 9895807250  
Chosen Option : 4

Q.3 On which date is the International Mountain Day celebrated?

5

- Ans
- 1.

2. 11<sup>th</sup> December

3. 2<sup>nd</sup> October

4. 13<sup>th</sup> January

Question ID : 9895807248  
Chosen Option : 2

Q.3  
6 Who is the author of the book 'Flight of Pigeon'?

- Ans
- 1. Shobha Dey
  - 2. Gita Piramal
  - 3. Sudha Murthy
  - 4. Ruskin Bond

Question ID : 9895807234  
Chosen Option : 4

Q.3  
7 The run-and-touch game of 'Kho Kho' originated in which Indian state?

- Ans
- 1. Kerala
  - 2. Jammu and Kashmir
  - 3. Goa
  - 4. Maharashtra

Question ID : 9895807231  
Chosen Option : 1

Q.3  
8 The Living Root Bridges are a rare ecological phenomenon seen in which state of India?

- Ans
- 1. West Bengal
  - 2. Meghalaya
  - 3. Sikkim
  - 4. Mizoram

Question ID : 9895807245  
Chosen Option : 1

Q.3  
9 The yolk of an egg contains more than 90% of which of the given vitamins?

- Ans
- 1. Vitamin C
  - 2. Vitamin B12
  - 3. Vitamin K
  - 4. Vitamin A

Question ID : 9895807243  
Chosen Option : 1

Q.4  
0 A seesaw is an example of which concept of physics?

- Ans
- 1. Current
  - 2. Time

3. Electricity

4. Force

Question ID : 9895807242

Chosen Option : 2

Q.4 While trying to promote growth by tax cuts as the fiscal policy, which type of policy is the government trying to follow?

1

Ans

1. Expansionary

2. Contractionary

3. Easy money

4. Tight money

Question ID : 9895807236

Chosen Option : 1

Q.4 Who among the following has been conferred the Rajiv Gandhi National Sadbhavana Award 2018?

2

Ans

1. Anna Hazare

2. Medha Patkar

3. Kailash Satyarthi

4. Gopalkrishna Gandhi

Question ID : 9895807235

Chosen Option : 2

Q.4 Urs Festival in Ajmer commemorates the death anniversary of which Sufi Saint?

3

Ans

1. Khwaja Moinuddin Chisti

2. Hazarat Nizamuddin

3. Mian Mir

4. Salim Chishti

Question ID : 9895807229

Chosen Option : 2

Q.4 'Kunbi Dance' is a popular dance associated with which Indian state?

4

Ans

1. Mizoram

2. Sikkim

3. Jammu and Kashmir

4. Goa

Question ID : 9895807228

Chosen Option : 1

Q.4 Who was the legendary co-founder and retired chairman of Indian tech giant Infosys?

5

Ans

1. Ashish Goel

2. N R Narayan Murthy

3. Yashish Dahiya

4. Navneet Singh,

Question ID : 9895807233  
Chosen Option : 2

Q.4 What do we call the stock of food grains purchased by the Government of India from the farmers through the Food Corporation of India (FCI)?

- Ans
- 1. Incentivized stock
  - 2. Return stock
  - 3. Subsidized stock
  - 4. Buffer stock

Question ID : 9895807238  
Chosen Option : 4

Q.4 In which year did the French traveller François Bernier arrive in India?

- Ans
- 1. 1656
  - 2. 1658
  - 3. 1678
  - 4. 1662

Question ID : 9895807251  
Chosen Option : 4

Q.4 What does the 103<sup>rd</sup> constitutional amendment deal with?

- Ans
- 1. Women's reservation
  - 2. Economic reservation
  - 3. Right to education
  - 4. Right against exploitation

Question ID : 9895807240  
Chosen Option : 4

Q.4 In which year did Emperor Akbar build the Buland Darwaja?

- Ans
- 1. 1502
  - 2. 1526
  - 3. 1534
  - 4. 1601

Question ID : 9895807230  
Chosen Option : 4

Q.5 Which of the following is the longest river in Europe?

- Ans
- 1. Mekong
  - 2. Zambezi
  - 3. Sepik
  - 4. Volga

Question ID : 9895807247

Chosen Option : 3

Q.5 A, B and C can do a piece of work in 20, 40 and 80 days respectively. In how many days can A do the work if he is assisted by B and C on every third day?

- Ans
1. 7 days
  2. 15 days
  3. 18 days
  4. 16 days

Question ID : 9895807569  
Chosen Option : 2

Q.5 Case A. In a certain store, the profit is 340% of the cost.  
Case B. If the cost increases by 32% but the selling price remains constant, approximately what percentage of the selling price is the profit in case A?

- Ans
1. 100%
  2. 32%
  3. 70%
  4. 320%

Question ID : 9895807562  
Chosen Option : 4

Q.5 A circle, with radius 8 cm, which has the area equal to the area of a triangle with base 8 cm. Then the length of the corresponding altitude of triangle is:

- Ans
1.  $38\pi$  cm
  2.  $16\pi$  cm
  3.  $8\pi$  cm
  4.  $18\pi$  cm

Question ID : 9895807572  
Chosen Option : 3

Q.5 The captain of a cricket team of 11 members is 28 years old and the wicket keeper is 4 years older than him. If the ages of these two are excluded, the average age of the remaining players is two years less than the average age of the whole team. What is the average age of the team?

- Ans
1. 15 years
  2. 22 years
  3. 21 years
  4. 29 years

Question ID : 9895807557  
Chosen Option : 2

Q.5 Two numbers are respectively 25% and 50% more than a third number. The ratio of the first number to second number is:

- Ans
1. 1:2
  2. 2:1
  3. 6:5
  4. 5:6

Question ID : 9895807563  
Chosen Option : 1

Q.5  
6  $\frac{4^2 + 4}{5} + 5 \times 2 - 3$  of 4 is

- Ans
- 1. 9
  - 2. 3
  - 3. 6
  - 4. 2

Question ID : 9895807554  
Chosen Option : 4

Q.5 A hollow iron pipe is 28 cm long and its external diameter is 10 cm. If the thickness of the pipe is 2 cm and iron weighs 7 g/cm<sup>3</sup>, then the weight of the pipe is:

- Ans
- 1. 70.4 g
  - 2. 7.04 g
  - 3. 74 g
  - 4. 7.40 g

Question ID : 9895807573  
Chosen Option : 1

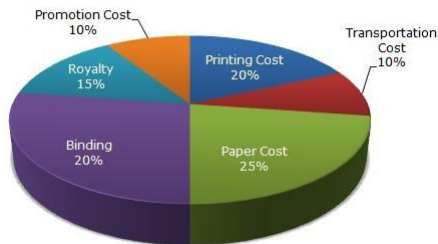
Q.5 A train can travel 50% faster than a car. Both start from point A at the same time and reach point B, 60 km away from point A, at the same time. On the way, however, the train lost about 12.5 min while stopping at the stations. The speed of the car is:

- Ans
- 1. 130 km/h
  - 2. 100 km/h
  - 3. 110 km/h
  - 4. 96 km/h

Question ID : 9895807571  
Chosen Option : 4

Q.5 The following pie-chart shows the percentage distribution of the expenditure incurred in publishing a book. Study the pie-chart and answer the questions based on it.

Various Expenditures (in percentage) Incurred in Publishing a Book



Royalty on the book is less than the paper cost by:

- Ans
- 1. 25%
  - 2. 30%
  - 3. 50%
  - 4. 40%

Question ID : 9895807577  
Chosen Option : 3

Q.6  
0

Ans

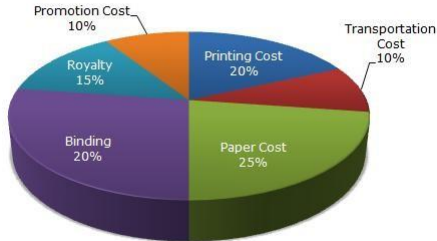


- 1. 7
- 2. 10
- 3. 11
- 4. 8

Question ID : 9895807559  
Chosen Option : 4

Q.6 The following pie-chart shows the percentage distribution of the expenditure incurred in publishing a book. Study the pie-chart and answer the questions based on it.

Various Expenditures (in percentage) Incurred in Publishing a Book



What is the central angle of the sector corresponding to the expenditure incurred on binding?

- Ans  1.  $72^\circ$
- 2.  $90^\circ$
  - 3.  $48^\circ$
  - 4.  $70^\circ$

Question ID : 9895807576  
Chosen Option : 2

Q.6 A family consists of two grandparents, three parents and four grandchildren. The average age of the grandparents is 65 years, that of the parents is 32 years and that of the grandchildren is 8 years. What is the average age of the family?

- Ans  1. None of these
- 2.  $28\frac{2}{3}$  years
  - 3. 28 years
  - 4.  $28\frac{1}{3}$  years

Question ID : 9895807556  
Chosen Option : 3

Q.6 A person has planned to sell his old typewriter for ₹4500, he would lose 10%. To gain 20% of profit, he should sell it for:

- Ans  1. ₹6000
- 2. ₹7000
  - 3. ₹7200
  - 4. ₹8500

Question ID : 9895807561  
Chosen Option : 1

Q.6 Salaries of Ravi and Sumit are in the ratio 2:3. If the salary of each is increased by ₹3000, the new ratio becomes 35:50. What is Sumit's new salary?

- Ans  1. ₹18,000
- 2. ₹21,000

3. ₹27,000

4. ₹30,000

Question ID : 9895807565  
Chosen Option : 2

Q.6 The compound interest on ₹40,000 at 6% per annum is ₹4,944. What is the period (in years) for which the amount is  
5 invested?

Ans  1. 5 years

2. 4 years

3. 3 years

4. 2 years

Question ID : 9895807567  
Chosen Option : 2

Q.6 A hall is 15 m long and 12 m broad. If the sum of the areas of the floor and the ceiling is equal to the sum of the areas of  
6 four walls, the volume (in  $m^3$ ) of the hall is:

Ans  1. 1600

2. 900

3. 1200

4. 720

Question ID : 9895807574  
Chosen Option : 4

Q.6 If a person had walked at the speed of 15 km/h instead of 10 km/h, he would have walked 25 km more. The actual  
7 distance travelled by him was:

Ans  1. 70 km

2. 56 km

3. 50 km

4. 80 km

Question ID : 9895807570  
Chosen Option : 1

Q.6 Raman paid ₹13,300 as simple interest after 9 years. He had borrowed some money at the rate of 6% for first two years,  
8 at 9% for next three years and at 14% for rest of the period. How much money (in ₹) did he borrow?

Ans  1. 10,000

2. 14,000

3. 12,500

4. 12,000

Question ID : 9895807566  
Chosen Option : 3

Q.6 If 15 workers can earn ₹1,800 in 10 days. Find the earning (in ₹) of 5 workers in 8 days.  
9

Ans  1. 400

2. 360

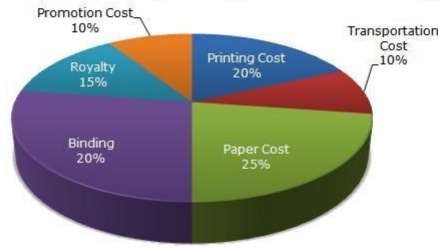
3. 540

4. 480

Question ID : 9895807568  
Chosen Option : 2

Q.7 The following pie-chart shows the percentage distribution of the expenditure incurred in publishing a book. Study the pie-chart and answer the questions based on it.

Various Expenditures (in percentage) Incurred in Publishing a Book



Question:

If for a certain quantity of books, the publisher has to pay ₹30,600 as printing cost, then what will be amount of paper cost to be paid for these books?

- Ans
1. ₹28,250
  2. ₹38,250
  3. ₹38,000
  4. ₹30,250

Question ID : 9895807575  
Chosen Option : 1

Q.7 Find the greatest number that will divide 47, 95 and 187 so as to leave the same remainder in each case.

- 1
- Ans
1. 7
  2. 13
  3. 9
  4. 4

Question ID : 9895807553  
Chosen Option : 4

Q.7 Raj got a new chair at 35% discount. Had Raj got no discount, Raj would have had to pay ₹238 more. How much did Raj pay for the chair?

- 2
- Ans
1. ₹452
  2. ₹442
  3. ₹416
  4. ₹424

Question ID : 9895807558  
Chosen Option : 2

Q.7 In a mixture of 60 L, the ratio of milk and water is 2:3, then the quantity of water in the mixture is:

- 3
- Ans
1. 20 L
  2. 45 L
  3. 36 L
  4. 16 L

Question ID : 9895807564  
Chosen Option : 3

Q.7  
4 What percentage of numbers from 1 to 80 have 1 or 9 in the units digit?

- Ans
- 1. 1%
  - 2. 20%
  - 3. 21%
  - 4. 14%

Question ID : 9895807560  
Chosen Option : 3

Q.7  
5 Simplify:

$$8.65 - [4 + 0.5 \text{ of } (8.8 - 2.3 \times 3.5)]$$

- Ans
- 1. 4.725
  - 2. 4.275
  - 3. 3.275
  - 4. 4.527

Question ID : 9895807555  
Chosen Option : 3

Section : English Language

Q.1 Select the word which means the same as the group of words given.

Someone in love with himself.

- Ans
- 1. Philologist
  - 2. Humanist
  - 3. Narcissist
  - 4. Philanthropist

Question ID : 9895807900  
Chosen Option : 2

Q.2 From the given options, identify the segment in the sentence which contains the grammatical error.

The book provide ample guidance and practice in learning English conversations effectively for all age groups.

- Ans
- 1. The book provide
  - 2. for all age groups
  - 3. ample guidance and practice
  - 4. in learning English conversations

Question ID : 9895807880  
Chosen Option : 4

Q.3 Select the most appropriate option to fill in the blank.

Sometimes a person's intelligence is not fully appreciated \_\_\_\_\_ he/she gets an opportunity.

- Ans
- 1. upto
  - 2. later

- ✓ 3. until  
✗ 4. unless

Question ID : 9895807886  
Chosen Option : 1

**Q.4** Select the most appropriate option to substitute the underlined segment in the given sentence. If there is no need to substitute it, select No improvement.

Passengers are requested to go for security check before they proceed to board the flight.

- Ans**
1. are request to go for
  2. are requests to go for
  3. are requesting to go for
  4. No improvement

Question ID : 9895807884  
Chosen Option : 1

**Q.5** Select the most appropriate option to substitute the underlined segment in the given sentence. If there is no need to substitute it, select No improvement.

My neighbour along with his children is going tonight to watch a movie based over the life of martyrs.

- Ans**
1. a movie based on the life of martyrs
  2. No improvement
  3. a movie basing on life of martyrs
  4. a movie base on the life of martyrs

Question ID : 9895807882  
Chosen Option : 1

**Comprehension:**

In the following passage some words have been deleted. Fill in the blanks with the help of the alternatives given.

Obesity can be (1) \_\_\_\_\_ by eating healthy food and increasing physical activity. There is no need to alter the quantity of the food but the quality of the food must be (2) \_\_\_\_\_ and improvised. Avoiding red meat, oily food, extra fats in form of ghee, butter etc. can dramatically help to reduce the weight. Moreover, if the right eating is accompanied (3) \_\_\_\_\_ physical work out, it becomes the perfect way to lose weight and stay healthy. In some patients (4) \_\_\_\_\_ is also carried out. The choice of the treatment (5) \_\_\_\_\_ on various factors and the decision is taken by the physician by thoroughly examining the patient.

SubQuestion No : 6

Q.6 Select the most appropriate option that will fill in the blank number 1.

- Ans
1. magnified
  2. destroyed
  3. tolerated
  4. managed

Question ID : 9895807888  
Chosen Option : 4

Comprehension:



In the following passage some words have been deleted. Fill in the blanks with the help of the alternatives given.

Obesity can be (1) \_\_\_\_\_ by eating healthy food and increasing physical activity. There is no need to alter the quantity of the food but the quality of the food must be (2) \_\_\_\_\_ and improvised. Avoiding red meat, oily food, extra fats in form of ghee, butter etc. can dramatically help to reduce the weight. Moreover, if the right eating is accompanied (3) \_\_\_\_\_ physical work out, it becomes the perfect way to lose weight and stay healthy. In some patients (4) \_\_\_\_\_ is also carried out. The choice of the treatment (5) \_\_\_\_\_ on various factors and the decision is taken by the physician by thoroughly examining the patient.

SubQuestion No : 7

Q.7 Select the most appropriate option that will fill in the blank number 2.

- Ans
- 1. checked
  - 2. decreased
  - 3. distinguished
  - 4. satisfied

Question ID : 9895807889  
Chosen Option : 1

Comprehension:

In the following passage some words have been deleted. Fill in the blanks with the help of the alternatives given.

Obesity can be (1) \_\_\_\_\_ by eating healthy food and increasing physical activity. There is no need to alter the quantity of the food but the quality of the food must be (2) \_\_\_\_\_ and improvised. Avoiding red meat, oily food, extra fats in form of ghee, butter etc. can dramatically help to reduce the weight. Moreover, if the right eating is accompanied (3) \_\_\_\_\_ physical work out, it becomes the perfect way to lose weight and stay healthy. In some patients (4) \_\_\_\_\_ is also carried out. The choice of the treatment (5) \_\_\_\_\_ on various factors and the decision is taken by the physician by thoroughly examining the patient.

SubQuestion No : 8

Q.8 Select the most appropriate option that will fill in the blank number 3.

- Ans  1. with  
 2. of  
 3. at  
 4. for

Question ID : 9895807890  
Chosen Option : 4

Comprehension:

In the following passage some words have been deleted. Fill in the blanks with the help of the alternatives given.

Obesity can be (1) \_\_\_\_\_ by eating healthy food and increasing physical activity. There is no need to alter the quantity of the food but the quality of the food must be (2) \_\_\_\_\_ and improvised. Avoiding red meat, oily food, extra fats in form of ghee, butter etc. can dramatically help to reduce the weight. Moreover, if the right eating is accompanied (3) \_\_\_\_\_ physical work out, it becomes the perfect way to lose weight and stay healthy. In some patients (4) \_\_\_\_\_ is also carried out. The choice of the treatment (5) \_\_\_\_\_ on various factors and the decision is taken by the physician by thoroughly examining the patient.

SubQuestion No : 9

Q.9 Select the most appropriate option that will fill in the blank number 4.

- Ans
- 1. amputation
  - ✓ 2. surgery
  - 3. segmentation
  - ✗ 4. dissection

Question ID : 9895807891  
Chosen Option : 3

Comprehension:

In the following passage some words have been deleted. Fill in the blanks with the help of the alternatives given.

Obesity can be (1) \_\_\_\_\_ by eating healthy food and increasing physical activity. There is no need to alter the quantity of the food but the quality of the food must be (2) \_\_\_\_\_ and improvised. Avoiding red meat, oily food, extra fats in form of ghee, butter etc. can dramatically help to reduce the weight. Moreover, if the right eating is accompanied (3) \_\_\_\_\_ physical work out, it becomes the perfect way to lose weight and stay healthy. In some patients (4) \_\_\_\_\_ is also carried out. The choice of the treatment (5) \_\_\_\_\_ on various factors and the decision is taken by the physician by thoroughly examining the patient.

SubQuestion No : 10

Q.1  
0 Select the most appropriate option that will fill in the blank number 5.

- Ans
- 1. avoids
  - 2. depends
  - 3. ignores
  - 4. loathes

Question ID : 9895807892  
Chosen Option : 2

Q.1  
1 Select the option that means the same as the given idiom.

To pull oneself together

- Ans
- 1. To hide important facts and reasons
  - 2. To put necessary matters on the table
  - 3. To keep working constantly with attention
  - 4. To calm oneself and begin to think or act

Question ID : 9895807898  
Chosen Option : 1

Q.1  
2 Select the correctly spelt word.

- Ans
- 1. Rehearsal
  - 2. Rehersal

- 3. Reehersal
- 4. Rehearsel

Question ID : 9895807901  
Chosen Option : 4

Q.1  
3 Select the option that means the same as the given idiom.

To be fair and square

- Ans
- 1. To be fair in colour
  - 2. To be honest
  - 3. To be good at drawing
  - 4. To be in a good physique

Question ID : 9895807897  
Chosen Option : 2

Q.1  
4 Select the most appropriate option to substitute the underlined segment in the given sentence. If there is no need to substitute it, select No improvement.

No sooner he has returned to home than his boss called him for an urgent meeting.

- Ans
- 1. No sooner had he returned home
  - 2. No sooner he returned to home
  - 3. No sooner he have returned to home
  - 4. No improvement

Question ID : 9895807883  
Chosen Option : 4

Q.1  
5 Select the antonym of the given word.

EXTRAVAGANT

- Ans
- 1. Economical
  - 2. Factual
  - 3. Untrue
  - 4. Wonderful

Question ID : 9895807896  
Chosen Option : 1

Q.1  
6 Select the most appropriate word to fill in the blank.

A person's individual risk for many diseases most often \_\_\_\_\_ from a combination of genes, environment and lifestyle.

- Ans
- 1. stems
  - 2. checks
  - 3. diagnoses
  - 4. stops

Question ID : 9895807904  
Chosen Option : 4



Q.1  
7 Select the most appropriate option to fill in the blank.

People can only form new habits when they \_\_\_\_\_ particular patterns of behaviour.

- Ans
1. has adopted
  2. having adopted
  3. had adopted
  4. have adopted

Question ID : 9895807885  
Chosen Option : 3

Q.1  
8 From the given options, identify the segment in the sentence which contains the grammatical error.

Taking the help of people with rich experience of life will saves you much time and effort.

- Ans
1. Taking the help of
  - ✗ 2. much time and effort
  3. people with rich experience
  4. will saves you

Question ID : 9895807881  
Chosen Option : 4

Q.1  
9 Select the synonym of the given word.

STRAY

- Ans
- ✗ 1. Slight
  - ✓ 2. Wander
  - ✗ 3. Steady
  - ✗ 4. Gruesome

Question ID : 9895807894  
Chosen Option : 1

Q.2  
0 From the given options, identify the segment in the sentence which contains the grammatical error.

Just because you are learning a language does not mean you need to limiting your thinking.

- Ans
- ✗ 1. does not mean
  2. need to limiting your thinking
  - ✗ 3. Just because
  4. you are learning a language

Question ID : 9895807879  
Chosen Option : 2

Q.2  
1 Select the most appropriate word to fill in the blank.

This is a good time for all of us to \_\_\_\_\_ a new year's party.

- Ans
- 1.



- 2. initiate
- 3. invite
- 4. organize

Question ID : 9895807903  
Chosen Option : 4

Q.2  
2 Select the word which means the same as the group of words given.

A large number of fish swimming together.

- Ans
- 1. Herd
  - 2. Pack
  - 3. Mob
  - 4. Shoal

Question ID : 9895807899  
Chosen Option : 2

Q.2  
3 Select the synonym of the given word.

ADULTERATED

- Ans
- 1. Combined
  - 2. Fused
  - 3. Contaminated
  - 4. Concentrated

Question ID : 9895807893  
Chosen Option : 4

Q.2  
4 Select the correctly spelt word.

- Ans
- 1. Quantetative
  - 2. Quantitativ
  - 3. Quantititive
  - 4. Quantitative

Question ID : 9895807902  
Chosen Option : 1

Q.2  
5 Select the antonym of the given word.

BENIGN

- Ans
- 1. Hostile
  - 2. Amiable
  - 3. Mild
  - 4. Genial

Question ID : 9895807895  
Chosen Option : 3

Q.1 निम्नलिखित में से उस विकल्प का चयन करें जो 'बाएँ हाथ का खेल होना' मुहावरे का अर्थ व्यक्त करता है।

Ans

1. आसान कार्य
2. मुश्किल कार्य
3. असंभव
4. बाएँ हाथ से खेलना

Question ID : 9895806677  
Chosen Option : --

Comprehension:

निम्नलिखित गद्यांश के रिक्त स्थानों की पूर्ति गद्यांश के नीचे दिए गए प्रश्नों के अनुसार कीजिए -

महादेवी ने इसी समाज में मजबूती से पाँव रोपकर अपने \_\_\_\_\_(1) की खोज की थी। व्यक्तित्व की खोज ही नहीं, उसकी \_\_\_\_\_(2) की खोज भी। कदाचित इसी कारण उनकी भावुकता में भी एक \_\_\_\_\_(3) है, तरलता में भी एक आंतरिक प्रतिरोध है, जो उनकी कविता से अधिक उनके गद्य में उजागर होता है। कविता में तो उसे प्रेरित करने वाले विशिष्ट भाव-प्रसंग का, उसके लौकिक \_\_\_\_\_(4) का अक्सर पता नहीं चलता। गद्य में वही कवित्व ठोस वस्तु स्थितियों से, स्वयं पढ़ने वाले की जीवनानुभूति से पग-पग आलोकित परिभाषित होता चलता है। महादेवी का गद्य अंतर्जगत और बहिर्जगत का एक अत्यंत रोचक और \_\_\_\_\_(5) संवाद घटित कराने वाला गद्य है।

SubQuestion No : 2

Q.2 गद्यांश में संकेतित रिक्त स्थान (1) के लिए उपयुक्त शब्द होगा

Ans

- ✓ 1. महत्व
2. संक्षिप्त
3. व्यक्तिव
- ✗ 4. अपनत्व

Question ID : 9895806668  
Chosen Option : --

Comprehension:

निम्नलिखित गद्यांश के रिक्त स्थानों की पूर्ति गद्यांश के नीचे दिए गए प्रश्नों के अनुसार कीजिए -

महादेवी ने इसी समाज में मजबूती से पाँव रोपकर अपने \_\_\_\_\_(1) की खोज की थी। व्यक्तित्व की खोज ही नहीं, उसकी \_\_\_\_\_(2) की खोज भी। कदाचित इसी कारण उनकी भावुकता में भी एक \_\_\_\_\_(3) है, तरलता में भी एक आंतरिक प्रतिरोध है, जो उनकी कविता से अधिक उनके गद्य में उजागर होता है। कविता में तो उसे प्रेरित करने वाले विशिष्ट भाव-प्रसंग का, उसके लौकिक \_\_\_\_\_(4) का अक्सर पता नहीं चलता। गद्य में वही कवित्व ठोस वस्तु स्थितियों से, स्वयं पढ़ने वाले की जीवनानुभूति से पग-पग आलोकित परिभाषित होता चलता है। महादेवी का गद्य अंतर्जगत और बहिर्जगत का एक अत्यंत रोचक और \_\_\_\_\_(5) संवाद घटित कराने वाला गद्य है।

SubQuestion No : 3

Q.3 गद्यांश में संकेतित रिक्त स्थान (2) के लिए उपयुक्त शब्द होगा

Ans

1. परोक्षता
2. प्रसन्नता
3. सार्थकता
4. विफलता

Question ID : 9895806669

Chosen Option : --

Comprehension:

SubQuestion No : 4

Q.4 गद्यांश में संकेतित रिक्त स्थान (3) के लिए उपयुक्त शब्द होगा

- Ans
1. कठोरता
  2. दृढ़ता
  3. निष्ठुरता
  4. तरलता

Question ID : 9895806670  
Chosen Option : --

Comprehension:

निम्नलिखित गद्यांश के रिक्त स्थानों की पूर्ति गद्यांश के नीचे दिए गए प्रश्नों के अनुसार कीजिए -

महादेवी ने इसी समाज में मजबूती से पाँव रोपकर अपने \_\_\_\_\_(1) की खोज की थी। व्यक्तित्व की खोज ही नहीं, उसकी \_\_\_\_\_(2) की खोज भी। कदाचित इसी कारण उनकी भावुकता में भी एक \_\_\_\_\_(3) है, तरलता में भी एक आंतरिक प्रतिरोध है, जो उनकी कविता से अधिक उनके गद्य में उजागर होता है। कविता में तो उसे प्रेरित करने वाले विशिष्ट भाव-प्रसंग का, उसके लौकिक \_\_\_\_\_(4) का अक्सर पता नहीं चलता। गद्य में वही कवित्व ठोस वस्तु स्थितियों से, स्वयं पढ़ने वाले की जीवनानुभूति से पग-पग आलोकित परिभाषित होता चलता है। महादेवी का गद्य अंतर्जगत और बहिर्जगत का एक अत्यंत रोचक और \_\_\_\_\_(5) संवाद घटित कराने वाला गद्य है।

SubQuestion No : 5

Q.5 गद्यांश में संकेतित रिक्त स्थान (4) के लिए उपयुक्त शब्द होगा

- Ans
1. विकार
  2. आधार
  3. औजार
  4. आभार

Question ID : 9895806671  
Chosen Option : --

Comprehension:



निम्नलिखित गद्यांश के रिक्त स्थानों की पूर्ति गद्यांश के नीचे दिए गए प्रश्नों के अनुसार कीजिए -

महादेवी ने इसी समाज में मजबूती से पाँव रोपकर अपने \_\_\_\_\_(1) की खोज की थी। व्यक्तित्व की खोज ही नहीं, उसकी \_\_\_\_\_(2) की खोज भी। कदाचित इसी कारण उनकी भावुकता में भी एक \_\_\_\_\_(3) है, तरलता में भी एक आंतरिक प्रतिरोध है, जो उनकी कविता से अधिक उनके गद्य में उजागर होता है। कविता में तो उसे प्रेरित करने वाले विशिष्ट भाव-प्रसंग का, उसके लौकिक \_\_\_\_\_(4) का अक्सर पता नहीं चलता। गद्य में वही कवित्व ठोस वस्तु स्थितियों से, स्वयं पढ़ने वाले की जीवनानुभूति से पग-पग आलोकित परिभाषित होता चलता है। महादेवी का गद्य अंतर्जगत और बहिर्जगत का एक अत्यंत रोचक और \_\_\_\_\_(5) संवाद घटित कराने वाला गद्य है।

SubQuestion No : 6

Q.6 गद्यांश में संकेतित रिक्त स्थान (5) के लिए उपयुक्त शब्द होगा

- Ans
1. अमार्मिक
  2. भौतिक
  3. अलौकिक
  4. मार्मिक

Question ID : 9895806672  
Chosen Option : --

Q.7 दिए गए वाक्य में रेखांकित खंड को प्रतिस्थापित करने के लिए उपयुक्त विकल्प का चयन करें।  
कुणाल अपने धन का भरपूर दुरुपयोग करता है।

- Ans
1. संचय
  2. व्यय
  3. अपव्यय
  4. मितव्यय

Question ID : 9895806662  
Chosen Option : --

Q.8 दिए गए वाक्य में रेखांकित खंड को प्रतिस्थापित करने के लिए उपयुक्त विकल्प का चयन करें।  
सड़क पर पड़ी लावारिस ,जिस पर संदेह हो, वस्तु को छूना नहीं चाहिए।

- Ans
1. अशक्त
  2. संदिग्ध
  3. मुमुक्षु
  4. शिल्प

Q.9 दिए गए शब्द का विलोम चुनें।

बहुज

- Ans
- 1. ज्ञानी
  - 2. अगम्य
  - 3. अल्पज
  - 4. विज

Q.10 दिए गए वाक्य का वह भाग ज्ञात करें जिसमें कोई त्रुटि है।

मोहन का आम का बगीचा बड़ी ही सुन्दर है।

- Ans
- 1. सुन्दर है।
  - 2. आम का बगीचा
  - 3. बड़ी ही
  - 4. मोहन का

Q.11 निम्नलिखित में से उस विकल्प का चयन करें जो 'बाल-बाल बचना' मुहावरे का अर्थ व्यक्त करता है।

- Ans
- 1. बालों को बचाना
  - 2. आसानी से बचना
  - 3. संकट से कठिनाई से बचना
  - 4. कठिनाई होना

Q.12 रिक्त स्थान को भरने के लिए उपयुक्त शब्द का चयन करें।

मेरे जीवन का लक्ष्य बहुत \_\_\_\_\_ है।

- Ans
- 1. ऊँचा
  - 2. मलिन
  - 3. खराब
  - 4. चौड़ा



Q.1  
3 रिक्त स्थान को भरने के लिए उपयुक्त शब्द का चयन करें।

तुमने मेहनत नहीं की इसलिए \_\_\_\_\_ हुए।

Ans

1. मेहमान
- ✗ 2. पागल
- ✓ 3. सफल
- ✗ 4. असफल

Question ID : 9895806663  
Chosen Option : --

Q.1  
4 दिए गए शब्द के पर्यायवाची शब्द का चयन करें।

आभूषण

Ans

1. अंलकार
2. सलिल
- ✗ 3. समास
4. वसुंधरा

Question ID : 9895806676  
Chosen Option : --

Q.1  
5 दिये गये वाक्यांश के लिए एक शब्द दीजिये।

जिसके समान कोई दूसरा न हो

Ans

1. अद्वितीय
2. दंडनीय
3. तुलनीय
4. गोपनीय

Question ID : 9895806679  
Chosen Option : --

Q.1  
6 दिए गए शब्द का विलोम चुनें।

शोक

Ans

1. दुख
2. हर्ष
3. सौभाग्य
4. दुर्भाग्य

Question ID : 9895806674  
Chosen Option : --

Q.1

7 दिये गये वाक्यांश के लिए एक शब्द दीजिये।

काम से जी चुराने वाला

- Ans
1. कर्मठ
  2. मेहनती
  3. कामचोर
  4. निर्लेज्ज

Question ID : 9895806680  
Chosen Option : --

Q.1 8 दिए गए वाक्य का वह भाग ज्ञात करें जिसमें कोई त्रुटि है।

मंदिर जाने से पूर्व भक्त मानव एक फूलों की माला बाजार से लाया।

- Ans
1. एक फूलों की माला
  2. भक्त मानव
  3. बाजार से लाया।
  4. मंदिर जाने से पूर्व

Question ID : 9895806659  
Chosen Option : --

Q.1 9 रिक्त स्थान को भरने के लिए उपयुक्त शब्द का चयन करें।

वसंत ऋतुओं का \_\_\_\_\_ है।

- Ans
1. मामा
  2. राजा
  3. भाई
  4. नाना

Question ID : 9895806664  
Chosen Option : --

Q.2 0 दिए गए वाक्य का वह भाग ज्ञात करें जिसमें कोई त्रुटि है।

जो व्यक्ति अधिक परिश्रम नहीं करता वे परीक्षा में सफलता प्राप्त नहीं करता।

- Ans
1. अधिक परिश्रम नहीं करता
  2. जो व्यक्ति
  3. सफलता प्राप्त नहीं करता।
  4. वे परीक्षा में

Question ID : 9895806657  
Chosen Option : --

Q.2

1 दिए गए वाक्य में रेखांकित खंड को प्रतिस्थापित करने के लिए उपयुक्त विकल्प का चयन करें।

भगवान कृष्ण भूत, वर्तमान और भविष्य को देखने वाले थे।

Ans

1. सूक्ष्मदर्शी
2. त्रिकालदर्शी
3. दूरदर्शी
4. पारदर्शी

Question ID : 9895806660  
Chosen Option : --

Q.2  
2 सही वर्तनी वाले शब्द का चयन करें।

Ans

1. अतीथिगृह
2. अतिथीगृह
3. अतिथिगृह
4. अतिथिग्रह

Question ID : 9895806681  
Chosen Option : --

Q.2  
3 दिए गए शब्द के पर्यायवाची शब्द का चयन करें।

क्षति

Ans

1. हानि
2. हार
3. श्रुति
4. क्षमता

Question ID : 9895806675  
Chosen Option : --

Q.2  
4 रिक्त स्थान को भरने के लिए उपयुक्त शब्द का चयन करें।

कृपया कूड़ेदान \_\_\_\_\_ प्रयोग करें।

Ans

1. में
2. से
3. का
4. पर

Question ID : 9895806665  
Chosen Option : --

Q.2  
5 सही वर्तनी वाले शब्द का चयन करें।

Ans

- 1.

✘ 2. ननिहाल

✔ 3. ननीहाल

✘ 4. नानीहाल

Question ID : 9895806682  
Chosen Option : --