

Constable (GD) in CAPFs, NIA, SSF and Rifleman (GD) in Assam Rifles Examination, 2018

Roll No. :	
Registration No.	
Name :	MD EHSAN
Exam Venue :	iON Digital Zone iDZ Baruipur
Exam Time :	9:00 AM - 10:30 AM
Exam Date :	21/02/2019

Section : **General Section**

Q.1 The statements below are followed by two conclusions labeled I and II. Assuming that the information in the statements is true, even if it appears at variance with generally established facts, decide which conclusion(s) logically and definitely follow(s) from the information given in the statements.

Statements:

- 1) Some stores are rooms.
- 2) Some rooms are posters.

Conclusion:

- I. Some rooms are stores.
- II: Some posters are rooms.

- Ans**
1. Only conclusion I follows.
 2. Both conclusions follow.
 3. Only conclusion II follows.
 4. Neither conclusion I nor conclusion II follows.

Question ID : **9895803989**
Chosen Option : **3**

Q.2 Select the option that is related to the third term in the same way as the second term is related to the first term.

- Ans**
1. Recall
 2. Recap
 3. Murmur
 4. Rejoice

Question ID : **9895803981**
Chosen Option : **4**

Q.3 Select the option that will correctly replace the question mark (?) in the series.

- Ans**
- 0 8 24 48 ?
1. 81
 2. 87
 3. 89
 4. 80

Question ID : **9895803990**
Chosen Option : **1**

Q.4 Select the option that is related to the third number in the same way as the second number is related to the first number.

12 : 180 :: 14 : ?

- Ans
- 1. 144
 - 2. 221
 - 3. 169
 - 4. 238

Question ID : 9895803992
Chosen Option : 4

Q.5 Choose the option that most closely resembles the mirror image of the given word if the mirror is placed at the right side.

HOMAGE

- Ans
- 1. **ƎƆAƆMƆH**
 - 2. **HOWAGE**
 - 3. **ƎƆAƆMƆH**
 - 4. **ƎƆAƆMƆH**

Question ID : 9895803999
Chosen Option : 1

Q.6 The statements below are followed by two conclusions labeled I and II. Assuming that the information in the statements is true, even if it appears at variance with generally established facts, decide which conclusion(s) logically and definitely follow(s) from the information given in the statements.

Statements:

- 1) All customers are clients.
- 2) All clients are medicines.

Conclusion:

- I. Some medicines are customers.
- II. Some medicines are clients.

- Ans
- 1. Either conclusion I or conclusion II follows.
 - 2. Both conclusions follow.
 - 3. Only conclusion II follows.
 - 4. Only conclusion I follows.

Question ID : 9895803988
Chosen Option : 2

Q.7 In a certain code, VIROLOGY is written as LOGYVIRO. How will SEMANTIC be written in that code?

- Ans
- 1. **NTICSEMA**
 - 2. **CITNAMES**
 - 3. **NTJCSEMA**
 - 4. **NTICSFMA**

Question ID : 9895803983
Chosen Option : 1

Q.8 There is only one runway which will be used by seven flights one by one. P and Q will use the runway neither first nor last. S will use it second after R. M will use it second before O. N will use it after O and before R. Q will use it just before S. Who will use the runway in the middle?

- Ans 1. O
 2. N
 3. P
 4. Q

Question ID : 9895803987
Chosen Option : 2

Q.9 Choose the odd one out of the given options.

- Ans 1. Silicon
 2. Magnesium
 3. Tungsten
 4. Aurum

Question ID : 9895803979
Chosen Option : 3

Q.1 Choose the odd one out of the given options.

- Ans 1. RGD
 2. HIL
 3. EKM
 4. QSC

Question ID : 9895803978
Chosen Option : 1

Q.1 Eight friends A, B, C, D, E, F, H and G are sitting around a circular table facing each other for a group discussion. A is opposite F and second to the right of E. G is between C and A. H is to the left of E. Who is sitting to the immediate left of A?

- Ans 1. Either G or D
 2. B
 3. C
 4. Either B or D

Question ID : 9895803986
Chosen Option : 3

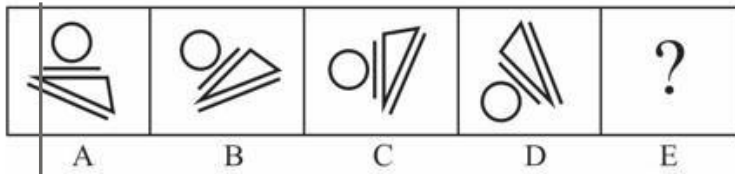
Q.1 Seven friends O, P, Q, R, S, T and U are watching a cricket match sitting in a stadium. P is sitting at one extreme end. T is sitting between Q and U, and R is sitting to the immediate right of S and immediate left of Q. U is sitting second to the left of P. Who is sitting between U and P?

- Ans 1. R
 2. O
 3. S
 4. Q

Question ID : 9895803985
Chosen Option : 3

Q.1
3

Choose the option that would follow next in the given figure series.



Ans

1.



2.



3.



4.



Question ID : 9895803996

Chosen Option : 4

Q.1
4

Ans 1. UY : CI :: GH : ?

2. UX : CI :: GH : ?

3. UU

4. UV

Question ID : 9895803982

Chosen Option : 4

Q.1 In a certain code, OPTIMIST is written as 121. How will PESSIMIST be written in that code?
5

Ans 1. 129

2. 105

3. 131

4. 127

Question ID : 9895803984

Chosen Option : 2

Q.1
6

Select the option that will correctly replace the question mark (?) in the series.

Ans 1. TIO
 2. TKP

3.

TJP

X 4.

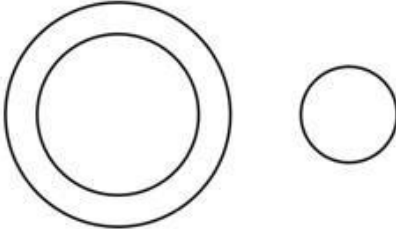
Question ID : 9895803977
Chosen Option : 3

Q.1
7 Select the Venn diagram that best represents the given set of classes.

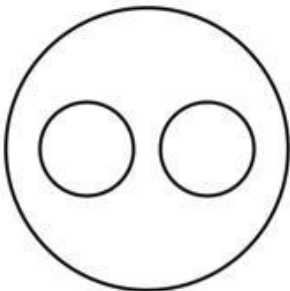
Animals, Mammals, Deer

Ans

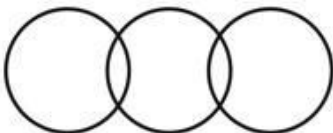
X 1.




X 2.



X 3.



✓ 4.



Question ID : 9895804001
Chosen Option : 1

Q.1
8 Choose the odd number out of the given options.

Ans X 1. 151

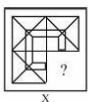
X 2. 163

X 3. 157



✓ 4. 161

Question ID : 9895803993
Chosen Option : 3

Q.1
9 Select a figure from amongst the four alternatives, that when placed in the blank space (?) of figure X will complete the pattern. (Rotation is not allowed).



Ans



Question ID : 9895803997
Chosen Option : 3

Q.2 Find out the two signs to be interchanged to make the following equation correct.

$$18 + 3 \times 27 - 9 \div 3 = 78$$

Ans 1. + and \times

2. + and \div

3. - and \div

4. + and -

Question ID : 9895803995
Chosen Option : 3

Q.2 Select the option that will correctly replace the question mark (?) in the series.

12, 22, 42, 82, ?

Ans 1. 172

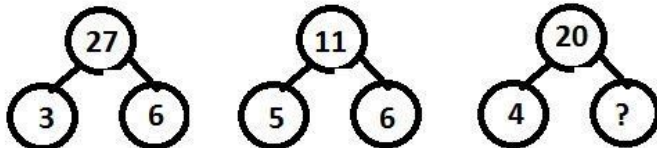
2. 182

3. 152

4. 162

Question ID : 9895803991
Chosen Option : 4

Q.2 Select the option that will correctly replace the question mark (?) in the given pattern.



Ans 1. 6

2. 24

3. 36

4. 8

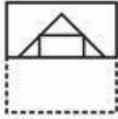
Question ID : 9895803994
Chosen Option : 1

Q.2 A square transparent sheet with a pattern is given. How will the pattern appear when the transparent sheet is folded along the dotted line?

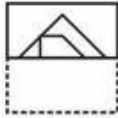


Ans

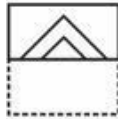
✓ 1.



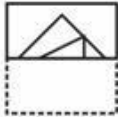
✗ 2.



✗ 3.



✗ 4.



Question ID : 9895804000

Chosen Option : 1

Q.2 Select the option that is related to the third term in the same way as the second term is related to the first term.

4

Blend : Mix :: Request : ?

Ans

✗ 1. Deny

2. Noting

✓ 3. Solicit

✗ 4. Accept

Question ID : 9895803980

Chosen Option : 4

Q.2 Select a figure from amongst the four alternatives, that when placed in the blank space (?) of figure X will complete the pattern. (Rotation is not allowed).

5



x

Ans

✗ 1.



✗ 2.



✗ 3.



✓ 4.



Question ID : 9895803998

Chosen Option : 4

Q.2 Which of the following statements about the Indus Valley Civilization is NOT true?

6

Ans 1.

It was an urban civilisation where people lived in well planned towns

2. Animal meat was the staple food

3.

It flourished around 2500 BC in the present day Pakistan and Western India

4. The houses were made of baked bricks

Question ID : 9895806381

Chosen Option : 4

Q.2
7 Dry Ice is the solid form of:

Ans 1. methane

2. carbon dioxide

3. oxygen

4. ozone

Question ID : 9895806390

Chosen Option : 4

Q.2
8 Timur invaded India during the reign of:

Ans 1. Akbar

2. Alauddin Khilji

3. Feroz Shah Tughlaq

4. Nasir-ud-Din Mahmud Shah Tughluq

Question ID : 9895806382

Chosen Option : 3

Q.2
9 Who wrote the book 'War and Peace'?

Ans 1. Vladimir Lenin

2. Leo Tolstoy

3. Karl Marx

4. Anton Chekhov

Question ID : 9895806400

Chosen Option : 2

Q.3
0 India has won 8 Olympic gold medals for field hockey. When was the last time India won a gold medal for hockey in Olympics?

Ans 1. 1976

2. 1984

3. 1988

4. 1980

Question ID : 9895806401

Chosen Option : 2

Q.3
1 Which of the following statements is NOT true about angiosperms?

Ans

- 1. They have stems, leaves and roots
- 2. Conifers, Cycads and Ginkgo are examples of angiosperms
- 3. They have to undergo pollination before they can reproduce
- 4. The flowers carry the reproductive organs

Question ID : 9895806389
Chosen Option : 3

Q.3
2 The economic survey is usually presented _____ before the Union Budget.

- Ans
- 1. 1 day
 - 2. 15 days
 - 3. 7 days
 - 4. 2 days

Question ID : 9895806396
Chosen Option : 3

Q.3
3 Gita Gopinath became the first woman to occupy the position of Chief Economist of:

- Ans
- 1. World Trade Organisation
 - 2. UNESCO
 - 3. World Bank
 - 4. International Monetary Fund

Question ID : 9895806398
Chosen Option : 1

Q.3
4 The holy place of the Jains, Shravanabelagola is situated in which district of Karnataka?

- Ans
- 1. Shimoga District
 - 2. Bellary District
 - 3. Mysore District
 - 4. Hassan District

Question ID : 9895806405
Chosen Option : 2

Q.3
5 The Government of India releases MSP of agricultural produce from time to time. What is the full form of MSP?

- Ans
- 1. Minimum Selling Price
 - 2. Minimum Support Price
 - 3. Maximum Selling Price
 - 4. Maximum Support Price

Question ID : 9895806397
Chosen Option : 3

Q.3
6 Golconda Fort was built in the 13th century by the _____ Dynasty.

Ans

- 1. Kakatiya
- 2. Chola
- 3. Periyar
- 4. Chalukya

Question ID : 9895806404
Chosen Option : 4

Q.3
7 In the context of climate, what is the full form of ITCZ?

- Ans
- 1. Indian Trough Conversation Zone
 - 2. Inter Tropical Convergence Zone
 - 3. Intra Temperate Control Zone
 - 4. Islandic Tropical Climate Zone

Question ID : 9895806386
Chosen Option : 2

Q.3
8 The Indian athlete Dutee Chand is associated to which of the following sporting events?

- Ans
- 1. Shotput
 - 2. Javelin
 - 3. Jumping
 - 4. Sprinting

Question ID : 9895806399
Chosen Option : 2

Q.3
9 A special property of acids and bases is their ability to _____ each other's properties.

- Ans
- 1. Crystalize
 - 2. Neutralize
 - 3. Amortize
 - 4. Naturalize

Question ID : 9895806387
Chosen Option : 2

Q.4
0 According to the report published by the World Health Organization (WHO) in 2017, approximately how many people in the world do NOT have access to safe drinking water at home?

- Ans
- 1. 4.2 billion
 - 2. 900 million
 - 3. 500 million
 - 4. 2.1 billion

Question ID : 9895806391
Chosen Option : 4

Q.4
1 'Kuchipudi' derives its roots from:

- Ans
- 1.

2. Andhra Pradesh

3. Puducherry

4. Tamil Nadu

Question ID : 9895806403

Chosen Option : 4

Q.4 Swachh Bharat Abhiyan was launched by the government of India on the birth anniversary of:
2

Ans 1. Mahatma Gandhi

2. Vallabhbhai Patel

3. Jawaharlal Nehru

4. Atal Bihari Vajpayee

Question ID : 9895806388

Chosen Option : 2

Q.4 The Constitution of India came into force on 26 January 1950. Which act or governing document did it replace?
3

Ans 1. Government of India Act, 1858

2. Government of India Act, 1935

3. Indian Councils Act, 1892

4. Regulating Act, 1773

Question ID : 9895806392

Chosen Option : 3

Q.4 The parliament has powers to amend the provisions of the Constitution of India. Which article of the constitution confers this power on the parliament?
4

Ans 1. Article 1

2. Article 256

3. Article 55

4. Article 368

Question ID : 9895806394

Chosen Option : 2

Q.4 The first major nationwide Satyagraha launched by Mahatma Gandhi was against:
5

Ans 1. Rowlatt Act

2. Partition of Bengal

3. Tax on Khadi products

4. Salt tax

Question ID : 9895806383

Chosen Option : 1

Q.4 Which of the following is NOT true about the 'Protection of Women from Domestic Violence Act, 2005'?
6

Ans 1. Injury can be physical, emotional or economic.

2. It also applies to violence at workplace.

3.

It applies in case of injury or harm or threat of injury or harm by the adult male member of the household.

4.

The term 'Domestic' includes all women who live or have lived in a shared household with the accused male member.

Question ID : 9895806393

Chosen Option : 2

Q.4
7 The host country for 2022 FIFA World Cup is:

Ans 1. Japan

2. Germany

3. France

4. Qatar

Question ID : 9895806402

Chosen Option : 3

Q.4
8 'Slash and burn' type of farming is also known as:

Ans 1. shifting farming

2. intensive subsistence farming

3. extensive farming

4. commercial farming

Question ID : 9895806384

Chosen Option : 2

Q.4
9 What is the monthly salary of the President of India as per 2018 Budget?

Ans 1. 4 lakhs

2. 2 lakhs

3. 5 lakhs

4. 3 lakhs

Question ID : 9895806395

Chosen Option : 1

Q.5
0 Which of the following is NOT a method of soil conservation?

Ans 1. Intercropping

2. Mulching

3. Contour Ploughing

4. Weathering

Question ID : 9895806385

Chosen Option : 2

Q.5
1 A sector is cut from a circle of diameter 42 cm. If the angle of the sector is 150° then what is its area in cm^2 .

(Take $\pi = \frac{22}{7}$)

Ans 1. 584.8

2. 577.5

3.

4. 580.4

Question ID : 9895806296
Chosen Option : 3

Q.5 The present ages of A and B are in the ratio 15 : 8. After 8 years their ages will be in the ratio 17 : 10. What will be the ratio of ages of A and B after 10 years from now?

Ans 1. 10 : 7

2. 8 : 5

3. 5 : 3

4. 7 : 4

Question ID : 9895806291
Chosen Option : 4

Q.5 A circus tent is cylindrical to a height of 3 meters and conical above it. If the radius of the base is 52.5 m and the slant height of the cone is 52m, then the total area of the canvas required to make it is:

Ans 1. 3048π

2. 3045π

3. 2730π

4. 2842π

Question ID : 9895806297
Chosen Option : 3

Q.5 The compound interest on a sum of ₹ 24500 at 10% p.a for $2\frac{2}{5}$ years interest compounded yearly is:

Ans 1. ₹ 6338.40

2. ₹ 6342

3. ₹ 6330.80

4. ₹ 6340

Question ID : 9895806294
Chosen Option : 1

Q.5 Study the following table, which shows the number of units of a product manufactured and sold by a company in five years, and answer questions.

Years	Number of units (in thousands) Manufactured	sold
2013	350	320
2014	375	315
2015	300	280
2016	450	423
2017	420	360

What percent of total units of the product manufactured in 2013 and 2015 is the total units unsold during the five years? (correct to one decimal place)

Ans 1. 30.8

2. 30.3

3. 29.6

4. 29.4

Question ID : 9895806303
Chosen Option : 3

Q.5
6

Study the following table, which shows the number of units of a product manufactured and sold by a company in five years, and answer questions.

Years	Number of units (in thousands) Manufactured	sold
2013	350	320
2014	375	315
2015	300	280
2016	450	423
2017	420	360

The ratio of the total number of units sold in 2014 and 2015 to the number of units manufactured in 2017 is:

- Ans 1. 17 : 12
 2. 19 : 14
 3. 9 : 8
 4. 14 : 17

Question ID : 9895806304
Chosen Option : 3

Q.5 ₇ The value of $1.6 \div 1.6$ of $1.6 + 0.6$ of $1.4 \div 0.5 - 0.001 \times 1.5 \div 0.075$ lies between:

- Ans 1. 2.4 and 2.6
 2. 2.6 and 2.8
 3. 2.2 and 2.4
 4. 2 and 2.2

Question ID : 9895806283
Chosen Option : 2

Q.5 ₈ The average of 10 numbers is 41. The average of first 3 numbers is 39.4 and the average of last 4 numbers is 43.5. 4th number is 2 more than the 5th number and 0.2 more than the 6th number. What is the average of the 4th and 6th numbers

- Ans 1. 38.7
 2. 38.9
 3. 39.6
 4. 39.9

Question ID : 9895806285
Chosen Option : 1

Q.5 ₉ The average age of 24 students in a class is 15.5 years. The age of their teacher is 28 years more than the average of all twenty five. What is the age of the teacher in years?

- Ans 1. $40\frac{1}{3}$
 2. $41\frac{2}{3}$
 3. $44\frac{2}{3}$
 4. $42\frac{1}{3}$

Question ID : 9895806284
Chosen Option : 4

Q.6 ₀ If 12, x, 8 and 14 are in proportion, then what is the mean proportional between $(x - 12)$ and $(x + 4)$?

- Ans 1. 12
 2. 11
 3. 16

✓ 4. 15

Question ID : 9895806290
Chosen Option : 1

Q.6 A 280 m long train is running at 108 km/hr. In how much time will it cross a bridge of length 170 m?

- 1
- Ans
- ✗ 1. 10 sec
 - ✓ 2. 15 sec
 - ✗ 3. 16 sec
 - ✗ 4. 12 sec

Question ID : 9895806300
Chosen Option : 2

Q.6 A shopkeepers profit was 16% of the sale of his goods. If the price at which he buys decreases by 20% while he reduces his selling price by 23%, what is now his percentage of profit? (correct to one decimal place)

- 2
- Ans
- ✓ 1. 14.6
 - ✗ 2. 15.4
 - ✗ 3. 14.9
 - ✗ 4. 15.8

Question ID : 9895806287
Chosen Option : 3

Q.6 The largest sphere is carved out of a cube of side 7 cm. What is the volume of the sphere in cm^3 (Take $\pi = \frac{22}{7}$)

- 3
- Ans
- ✓ 1. $179\frac{2}{3}$
 - 2. $182\frac{1}{3}$
 - 3. $179\frac{1}{3}$
 - 4. $182\frac{2}{3}$

Question ID : 9895806298
Chosen Option : 2

Q.6 Two vessels A and B contain solution of acid and water. In A and B the ratio of acid and water are 7 : 3 and 4 : 1, respectively. They are mixed in the ration 1 : 2. What is the ratio of acid and water in the resulting solution?

- 4
- Ans
- ✗ 1. 15 : 8
 - ✗ 2. 16 : 7
 - ✓ 3. 23 : 7
 - ✗ 4. 25 : 9

Question ID : 9895806292
Chosen Option : 1

Q.6 Let x be the least multiple of 29 which when divided by 20, 21, 22, 24 and 28 then the remainders are 13, 14, 15, 17 and 21 respectively. What is the sum of digits of x?

- 5
- Ans
- ✗ 1. 18
 - ✗ 2. 22
 - ✗ 3. 19
 - ✓ 4. 23

Question ID : 9895806281
Chosen Option : 3

Q.6 At what percentage above the cost price must an article be marked so as to gain 38% after allowing a customer a discount of 8% on the marked price?

- Ans
- 1. 48
 - 2. 46
 - 3. 50
 - 4. 45

Question ID : 9895806286
Chosen Option : 2

Q.6 The numbers 6, 8, 11, 12, $2x - 8$, $2x + 10$, 35, 41, 42, 50 are written in ascending order. If their median is 25, then what is the mean of the numbers?

- Ans
- 1. 24.8
 - 2. 24.6
 - 3. 25.5
 - 4. 25.2

Question ID : 9895806295
Chosen Option : 3

Q.6 A takes 6 hours more than B to cover a distance of 60 km. But if A doubles his speed, he takes 3 hours less than B to cover the same distance. The speed (in km/hr) of A is:

- Ans
- 1. $3\frac{1}{3}$
 - 2. $4\frac{2}{3}$
 - 3. 4
 - 4. 5

Question ID : 9895806299
Chosen Option : 4

Q.6 A sum of ₹ 1518 is divided among A, B, and C, such that A receives 20% more than B and B receives 20% less than C. What is the share of C in the sum?

- Ans
- 1. ₹ 528
 - 2. ₹ 440
 - 3. ₹ 550
 - 4. ₹ 572

Question ID : 9895806289
Chosen Option : 1

Q.7 Study the following table, which shows the number of units of a product manufactured and sold by a company in five years, and answer questions.

Years	Number of units (in thousands) Manufactured	sold
2013	350	320
2014	375	315
2015	300	280
2016	450	423
2017	420	360

In which year the number of units of the product sold is 19000 more than the average number of units manufactured per year?

- Ans 1.

2. 2015

3. 2017

4. 2014

Question ID : 9895806305
Chosen Option : 2

Q.7 The simple interest on a certain sum is $11\frac{1}{9}\%$ of the sum and the number of years is equal to the rate percent per annum.

1 What will be the simple interest on a sum of ₹ 12600 at the same rate for $2\frac{4}{5}$ years?

Ans 1. ₹ 1216

2. ₹ 1224

3. ₹ 1176

4. ₹ 1164

Question ID : 9895806293
Chosen Option : 4

Q.7 A can complete $\frac{2}{3}$ of a work in 8 days. B can complete $\frac{3}{5}$ of the same work in 12 days and C can complete $\frac{4}{9}$ of the same work in 8 days. A and B worked together for 5 days. How much time (in days) will C alone take to complete the remaining work?

Ans 1. 6

2. $7\frac{1}{2}$

3. $8\frac{1}{2}$

4. 9

Question ID : 9895806302
Chosen Option : 3

Q.7 The ratios of efficiencies of A and B of doing a certain work is 5 : 8. Working together they can complete the work in 20 days. A alone will complete 25% of that work in:

Ans 1. 14 days

2. 12 days

3. 11 days

4. 13 days

Question ID : 9895806301
Chosen Option : 2

Q.7 If 20% more would be gained by selling an article for ₹ 93 than selling it for ₹ 85, then the cost price of the article is:

Ans 1. ₹ 64

2. ₹ 40

3. ₹ 56

4. ₹ 60

Question ID : 9895806288
Chosen Option : 2

Q.7 The value of $5\frac{5}{6} \div 3\frac{1}{2} \times 2\frac{1}{10} + \frac{3}{5}$ of $7\frac{1}{2} \div \frac{2}{3} - \frac{2}{3} \div \frac{8}{15} \times 1\frac{1}{5}$

Ans

✓ 1. $8\frac{3}{4}$

✗ 2. $2\frac{3}{5}$

✗ 3. $8\frac{3}{5}$

✗ 4. $1\frac{3}{4}$

Question ID : 9895806282
Chosen Option : 2

Section : English Language

Q.1 Select the antonym of the given word.

GRANT

- Ans ✓ 1. Refuse
✗ 2. Approve
3. Reject
✗ 4. Sanction

Question ID : 9895806066
Chosen Option : 4

Q.2 Select the most appropriate option to substitute the underlined segment in the given sentence. If there is no need to substitute it, select No improvement.

A team of doctors is focusing over treatment of cancer at an early age.

- Ans 1. is focusing onto treatment of cancer
2. is focusing on treatment of cancer
3. No improvement
4. is focusing in treatment of cancer

Question ID : 9895806055
Chosen Option : 4

Q.3 From the given options, identify the segment in the sentence which contains the grammatical error.

As a painter he are good if not better than Suresh.

- Ans 1. he are good
✗ 2. than Suresh
✗ 3. if not better
4. As a painter

Question ID : 9895806052
Chosen Option : 1

Q.4 Select the most appropriate option to substitute the underlined segment in the given sentence. If there is no need to substitute it, select No improvement.

He have been working on and off for two years to complete a book.

- Ans ✗ 1. has work
✗ 2. have worked

- 3. No improvement
- 4. has been working

Question ID : 9895806053
Chosen Option : 2

Q.5 Select the word which means the same as the group of words given.

One who makes an eloquent public speech

- Ans
- 1. Leader
 - 2. Debater
 - 3. Speaker
 - 4. Orator

Question ID : 9895806070
Chosen Option : 1

Q.6 Select the most appropriate option to substitute the underlined segment in the given sentence. If there is no need to substitute it, select No improvement.

Would you mind help me with these questions?

- Ans
- 1. Would you mind helping
 - 2. Would you mind for helping
 - 3. No improvement
 - 4. Would you mind to help

Question ID : 9895806054
Chosen Option : 4

Q.7 Select the word which means the same as the group of words given.

The absence of government in a country

- Ans
- 1. Bureaucracy
 - 2. Anarchy
 - 3. Autocracy
 - 4. Democracy

Question ID : 9895806071
Chosen Option : 4

Q.8 Select the option that means the same as the given idiom.

In black and white

- Ans
- 1. In writing
 - 2. In colour
 - 3. Scanned
 - 4. Photocopied

Question ID : 9895806068
Chosen Option : 3

Comprehension:

In the following passage some words have been deleted. Fill in the blanks with the help of the alternatives given.

In 1893, Lokmanya Tilak converted the Ganapati festival _____ (1) a national celebration. He campaigned for _____ (2) wide celebration of this public festival throughout Maharashtra. It was _____ (3) this festival that he _____ (4) mobilise public support for the nationalist _____ (5)

SubQuestion No : 9

Q.9 Select the most appropriate option that will fill in the blank number 1.

- Ans
- 1. with
 - 2. into
 - 3. for
 - 4. to

Question ID : 9895806059
Chosen Option : 1

Comprehension:

In the following passage some words have been deleted. Fill in the blanks with the help of the alternatives given.

In 1893, Lokmanya Tilak converted the Ganapati festival _____ (1) a national celebration. He campaigned for _____ (2) wide celebration of this public festival throughout Maharashtra. It was _____ (3) this festival that he _____ (4) mobilise public support for the nationalist _____ (5)

SubQuestion No : 10

Q.10 Select the most appropriate option that will fill in the blank number 2.

- Ans
- 1. a
 - 2. some
 - 3. the
 - 4. one

Question ID : 9895806060
Chosen Option : 2

Comprehension:

In the following passage some words have been deleted. Fill in the blanks with the help of the alternatives given.

In 1893, Lokmanya Tilak converted the Ganapati festival _____ (1) a national celebration. He campaigned for _____ (2) wide celebration of this public festival throughout Maharashtra. It was _____ (3) this festival that he _____ (4) mobilise public support for the nationalist _____ (5)

SubQuestion No : 11

Q.1

1 Select the most appropriate option that will fill in the blank number 3.

- Ans 1. with
 2. through
 3. without
 4. throughout

Question ID : 9895806061
Chosen Option : 2

Comprehension:

In the following passage some words have been deleted. Fill in the blanks with the help of the alternatives given.

In 1893, Lokmanya Tilak converted the Ganapati festival _____ (1) a national celebration. He campaigned for _____ (2) wide celebration of this public festival throughout Maharashtra. It was _____ (3) this festival that he _____ (4) mobilise public support for the nationalist _____ (5)

SubQuestion No : 12

Q.1
2 Select the most appropriate option that will fill in the blank number 4.

- Ans 1. may
 2. can
 3. will
 4. could

Question ID : 9895806062
Chosen Option : 1

Comprehension:

In the following passage some words have been deleted. Fill in the blanks with the help of the alternatives given.

In 1893, Lokmanya Tilak converted the Ganapati festival _____ (1) a national celebration. He campaigned for _____ (2) wide celebration of this public festival throughout Maharashtra. It was _____ (3) this festival that he _____ (4) mobilise public support for the nationalist _____ (5)

SubQuestion No : 13

Q.1
3 Select the most appropriate option that will fill in the blank number 5.

- Ans 1. movement
 2. term
 3. season
 4. festival

Question ID : 9895806063
Chosen Option : 3

4 Select the most appropriate option to fill in the blank.

'Discovery of India' _____ by Jawaharlal Nehru.

- Ans
- 1. have been written
 - 2. has written
 - 3. has been written
 - 4. have written

Question ID : 9895806057
Chosen Option : 2

Q.1
5 Select the correctly spelt word.

- Ans
- 1. Acquaintance
 - 2. Acquaintance
 - 3. Acquaintance
 - 4. Acquaintence

Question ID : 9895806072
Chosen Option : 2

Q.1 From the given options, identify the segment in the sentence which contains the grammatical error.

6

When I asked for directions, he gave me many wrong informations.

- Ans
- 1. When I asked
 - 2. for directions
 - 3. wrong informations
 - 4. gave me many

Question ID : 9895806051
Chosen Option : 2

Q.1
7 Select the synonym of the given word.

ZENITH

- Ans
- 1. Peak
 - 2. Border
 - 3. Brink
 - 4. Edge

Question ID : 9895806065
Chosen Option : 3

Q.1
8 Select the option that means the same as the given idiom.

Hit the nail on the head

- Ans
- 1. Accurately right
 - 2. Hit the nail exactly
 - 3. Use hammer and nail

4. Use some tools

Question ID : 9895806069
Chosen Option : 1

Q.1
9 Select the synonym of the given word.

RESISTANCE

- Ans
1. Approval
 2. Recognition
 3. Refusal
 4. Enthusiasm

Question ID : 9895806064
Chosen Option : 3

Q.2
0 Select the antonym of the given word.

HUMILITY

- Ans
1. Cruelty
 2. Shyness
 3. Obedience
 4. Modesty

Question ID : 9895806067
Chosen Option : 3

Q.2
1 Select the most appropriate option to fill in the blank.

One should be careful to check the grease and oil in _____ car occasionally for it's smooth functioning.

- Ans
1. ones
 2. their
 3. our
 4. one's

Question ID : 9895806056
Chosen Option : 2

Q.2
2 From the given options, identify the segment in the sentence which contains the grammatical error.

Is the older person always more wiser than the younger one?

- Ans
1. Is the
 2. more wiser
 3. older person always
 4. than the younger one?

Question ID : 9895806050
Chosen Option : 2

Q.2
3 Select the most appropriate word to fill in the blank.

Many tourists to India visit the beautiful valley of Kashmir _____ in spring and summer.

- Ans 1. generally
 2. rarely
 3. especially
 4. frequently

Question ID : 9895806074
Chosen Option : 3

Q.2 Select the most appropriate word to fill in the blank.
4

Our society is _____ by the evil of corruption; the integrity of even senior officials is disputed.

- Ans 1. indicated
 2. endangered
 3. specified
 4. identified

Question ID : 9895806075
Chosen Option : 4

Q.2 Select the correctly spelt word.
5

- Ans 1. Millennium
 2. Milennium
 3. Millenniam
 4. Millenium

Question ID : 9895806073
Chosen Option : 4

Section : Hindi Language

Q.1 दिये गये वाक्यांश के लिए एक शब्द दीजिये।

जिसका अंत न हो

- Ans 1. अनंत
 2. अंतिम
 3. अजर
 4. अज्ञात

Question ID : 9895806046
Chosen Option : --

Q.2 रिक्त स्थान को भरने के लिए उपयुक्त शब्द का चयन करें।

घोड़े पर सवार वह _____ पड़ा।

- Ans 1. उड़
 2. खेल

✗ 3. गिर

✗ 4. धर

Question ID : 9895806032

Chosen Option : --

Q.3 निम्नलिखित में से उस विकल्प का चयन करें जो 'नाक में दम करना' मुहावरे का अर्थ व्यक्त करता है।

Ans ✓ 1. अपमान करना

2. बहुत परेशान करना

3. दम को रोकना

✗ 4. शान्त रहना

Question ID : 9895806044

Chosen Option : --

Q.4 दिए गए शब्द के पर्यायवाची शब्द का चयन करें।

प्रधान

Ans 1. गौण

2. मंत्री

3. नेता

4. मुख्य

Question ID : 9895806043

Chosen Option : --

Q.5 निम्नलिखित में से उस विकल्प का चयन करें जो 'घर फूँककर तमाशा देखना' मुहावरे का अर्थ व्यक्त करता है।

Ans 1. निकम्मा होना

2. घर को फूँकना

3. अपनी हानि करके मौजमस्ती करना

4. तमाशा देखना

Question ID : 9895806045

Chosen Option : --

Q.6 दिये गये वाक्यांश के लिए एक शब्द दीजिये।

जिसमें कोई संदेह न हो

Ans 1. संदेहशील

2. संदेहास्पद

3. निस्संदेह

✗ 4. ससंदेह

Q.7 सही वर्तनी वाले शब्द का चयन करें।

- Ans
1. चतुरभुज
 2. चतुर्भुज
 3. चर्तुभुज
 4. चत्तूभूज

Comprehension:

निम्नलिखित गद्यांश के रिक्त स्थानों की पूर्ति गद्यांश के नीचे दिए गए प्रश्नों के अनुसार कीजिए-

दैनिक जीवन के सभी कार्य मनुष्य और _____ (1) एक समान करते हैं। मनुष्य और पशु दोनों में यदि कोई अंतर है तो बस यही कि मनुष्य में परोपकार की _____ (2) होती है। वह इसमें आनंद अनुभव करता है। पशु इस _____ (3) से वंचित रह जाते हैं। परोपकार तो हमारी भारतीय _____ (4) के मूल में है। भारतीय इतिहास में ऐसे अनेक उदाहरण मिल जाएँगे जिन्होंने _____ (5) के लिए अपना सर्वस्व दान कर दिया।

SubQuestion No : 8

Q.8 गद्यांश में संकेतित रिक्त स्थान (1) के लिए उपयुक्त शब्द होगा।

- Ans
1. पशु
 2. सूर्य
 3. तारे
 4. चाँद

Comprehension:

निम्नलिखित गद्यांश के रिक्त स्थानों की पूर्ति गद्यांश के नीचे दिए गए प्रश्नों के अनुसार कीजिए-

दैनिक जीवन के सभी कार्य मनुष्य और _____ (1) एक समान करते हैं। मनुष्य और पशु दोनों में यदि कोई अंतर है तो बस यही कि मनुष्य में परोपकार की _____ (2) होती है। वह इसमें आनंद अनुभव करता है। पशु इस _____ (3) से वंचित रह जाते हैं। परोपकार तो हमारी भारतीय _____ (4) के मूल में है। भारतीय इतिहास में ऐसे अनेक उदाहरण मिल जाएँगे जिन्होंने _____ (5) के लिए अपना सर्वस्व दान कर दिया।

SubQuestion No : 9

Q.9 गद्यांश में संकेतित रिक्त स्थान (2) के लिए उपयुक्त शब्द होगा।

- Ans 1. भावना
2. संकेत
3. खिलवाड़
4. घृणा

Question ID : 9895806036
Chosen Option : --

Comprehension:

निम्नलिखित गद्यांश के रिक्त स्थानों की पूर्ति गद्यांश के नीचे दिए गए प्रश्नों के अनुसार कीजिए-

दैनिक जीवन के सभी कार्य मनुष्य और _____ (1) एक समान करते हैं। मनुष्य और पशु दोनों में यदि कोई अंतर है तो बस यही कि मनुष्य में परोपकार की _____ (2) होती है। वह इसमें आनंद अनुभव करता है। पशु इस _____ (3) से वंचित रह जाते हैं। परोपकार तो हमारी भारतीय _____ (4) के मूल में है। भारतीय इतिहास में ऐसे अनेक उदाहरण मिल जाएँगे जिन्होंने _____ (5) के लिए अपना सर्वस्व दान कर दिया।

SubQuestion No : 10

Q.10 गद्यांश में संकेतित रिक्त स्थान (3) के लिए उपयुक्त शब्द होगा।

- Ans 1. तमाशा
2. दुख
3. खेल
4. आनंद

Question ID : 9895806037
Chosen Option : --

Comprehension:

निम्नलिखित गद्यांश के रिक्त स्थानों की पूर्ति गद्यांश के नीचे दिए गए प्रश्नों के अनुसार कीजिए-

दैनिक जीवन के सभी कार्य मनुष्य और _____ (1) एक समान करते हैं। मनुष्य और पशु दोनों में यदि कोई अंतर है तो बस यही कि मनुष्य में परोपकार की _____ (2) होती है। वह इसमें आनंद अनुभव करता है। पशु इस _____ (3) से वंचित रह जाते हैं। परोपकार तो हमारी भारतीय _____ (4) के मूल में है। भारतीय इतिहास में ऐसे अनेक उदाहरण मिल जाएँगे जिन्होंने _____ (5) के लिए अपना सर्वस्व दान कर दिया।

SubQuestion No : 11

Q.1
1 गद्यांश में संकेतित रिक्त स्थान (4) के लिए उपयुक्त शब्द होगा।

- Ans
1. संस्कृति
 2. पुस्तक
 3. देश
 4. पुराण

Question ID : 9895806038
Chosen Option : --

Comprehension:

निम्नलिखित गद्यांश के रिक्त स्थानों की पूर्ति गद्यांश के नीचे दिए गए प्रश्नों के अनुसार कीजिए-

दैनिक जीवन के सभी कार्य मनुष्य और _____ (1) एक समान करते हैं। मनुष्य और पशु दोनों में यदि कोई अंतर है तो बस यही कि मनुष्य में परोपकार की _____ (2) होती है। वह इसमें आनंद अनुभव करता है। पशु इस _____ (3) से वंचित रह जाते हैं। परोपकार तो हमारी भारतीय _____ (4) के मूल में है। भारतीय इतिहास में ऐसे अनेक उदाहरण मिल जाएँगे जिन्होंने _____ (5) के लिए अपना सर्वस्व दान कर दिया।

SubQuestion No : 12

Q.1
2 गद्यांश में संकेतित रिक्त स्थान (5) के लिए उपयुक्त शब्द होगा।

- Ans
1. मूर्खता
 2. लड़ाई
 3. परोपकार
 4. संघर्ष

Question ID : 9895806039
Chosen Option : --

Q.1
3 दिए गए शब्द का विलोम चुनें।

निर्मल

Ans

1. कमजोर
2. मलिन
3. निर्जल
- ✓ 4. ताकतवर

Question ID : 9895806041
Chosen Option : --

Q.1
4 दिए गए वाक्य में रेखांकित खंड को प्रतिस्थापित करने के लिए उपयुक्त विकल्प का चयन करें।

इस समय हमारे देश से भावनात्मक एकता की आवश्यकता है।

Ans

1. इस समय हमारे देशों को
2. इस समय हमारे देश पर
3. इस समय हमारे देश का
4. इस समय हमारे देशों का

Question ID : 9895806029
Chosen Option : --

Q.1
5 दिए गए वाक्य का वह भाग ज्ञात करें जिसमें कोई त्रुटि है।

समय की गति बड़ी अद्भुत है, समय किसी की भी प्रतीक्षा नहीं करती।

Ans

1. प्रतीक्षा नहीं करती।
2. समय की गति
3. समय किसी की भी
4. बड़ी अद्भुत है,

Question ID : 9895806024
Chosen Option : --

Q.1
6 दिए गए शब्द का विलोम चुनें।

उज्ज्वल

Ans

1. प्रकाशित
- ✗ 2. स्वच्छ
3. पारदर्शी
4. धूमिल

Question ID : 9895806040
Chosen Option : --

Q.1
7 रिक्त स्थान को भरने के लिए उपयुक्त शब्द का चयन करें।

बाहर _____ आया है?

- Ans
1. कौन
 2. मैं
 3. हम
 4. किसने

Question ID : 9895806033
Chosen Option : --

Q.1
8 दिए गए वाक्य में रेखांकित खंड को प्रतिस्थापित करने के लिए उपयुक्त विकल्प का चयन करें।

मुझे पनीर का मिठाई बहुत पसंद है।

- Ans
1. पनीर को मिठाई
 2. पनीर में मिठाई
 3. पनीर से मिठाई
 4. पनीर की मिठाई

Question ID : 9895806027
Chosen Option : --

Q.1
9 दिए गए वाक्य का वह भाग ज्ञात करें जिसमें कोई त्रुटि है।

जंगल में जाने पर उसके सामने भील आ गई।

- Ans
1. जाने पर
 2. जंगल में
 3. भील आ गई।
 4. उसके सामने

Question ID : 9895806025
Chosen Option : --

Q.2
0 सही वर्तनी वाले शब्द का चयन करें।

- Ans
1. गायिका
 2. गायिका
 3. गयिका
 4. गयीका

Question ID : 9895806048
Chosen Option : --

Q.2
1

दिए गए शब्द के पर्यायवाची शब्द का चयन करें।

संपूर्ण

Ans

1. पूरा
2. छोटा
3. अधूरा
- ✗ 4. आधा

Question ID : 9895806042
Chosen Option : --

Q.2 दिए गए वाक्य का वह भाग ज्ञात करें जिसमें कोई त्रुटि है।

अपना संतान किसे अच्छी नहीं लगती, फिर भी दूसरों के प्रति उदार रहना हमारा धर्म है।

Ans

- ✗ 1. फिर भी दूसरों के प्रति उदार रहना
2. हमारा धर्म है
3. अपना संतान
4. किसे अच्छी नहीं लगती,

Question ID : 9895806026
Chosen Option : --

Q.2 रिक्त स्थान को भरने के लिए उपयुक्त शब्द का चयन करें।

महात्मा गांधी _____ हैं।

Ans

1. असत्यवादी
- ✗ 2. अल्पज्ञ
- ✗ 3. वाचाल
4. लोकप्रिय

Question ID : 9895806031
Chosen Option : --

Q.2 दिए गए वाक्य में रेखांकित खंड को प्रतिस्थापित करने के लिए उपयुक्त विकल्प का चयन करें।

दिवाली के त्योहार पर बाजार में दुकानों भी सजी है।

Ans

- ✓ 1. दुकान भी सजा है।
2. दुकान भी सजे हैं।
3. दुकानों भी सजे हैं।
4. दुकानें भी सजी हैं।

Question ID : 9895806028
Chosen Option : --

Q.2
5 रिक्त स्थान को भरने के लिए उपयुक्त शब्द का चयन करें।

घर के _____ अस्पताल है।

- Ans
- 1. सामने
 - 2. अंदर
 - 3. द्वारा
 - 4. बिना

Question ID : 9895806030
Chosen Option : --

Constable (GD) in CAPFs, NIA, SSF and Rifleman (GD) in Assam Rifles Examination, 2018

Roll No. :	
Registration No.	
Name :	
Exam Venue :	ION Digital Zone IDZ Thrissur
Exam Time :	4:00 PM - 5:30 PM
Exam Date :	21/02/2019

Section : General Section

Q.1 If $A = 2$ and $D = 5$, and $SEA = 28$, then $COUNTRY = \underline{\hspace{2cm}}$.

- Ans 1. 123
 2. 132
 3. 112
 4. 121

Question ID : 9895806237
Chosen Option : 1

Q.2

Read the given statements and conclusions carefully and decide which of the conclusions logically follow(s) from the statements.

Statements:

- 1) All students in my class are active.
- 2) Rohini is not active.

Conclusions:

- I. Rohini is not a student of my class.

- Ans 1. Both conclusions I and II follow.
 2. Only conclusion I follows.
 3. Only conclusion II follows.
 4. Neither conclusion I nor II follows.

Question ID : 9895806242
Chosen Option : 3

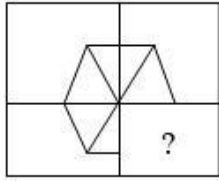
Q.3

Choose the word from the given options that is similar to the given words and hence belongs to the same group.

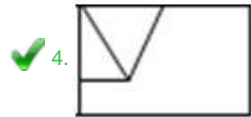

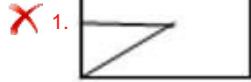
- Ans 1. Lisbon
 2. Cairo
 3. Rial
 4. Oslo

Question ID : 9895806235

Q.4 Select the correct option to complete the following pattern.



Ans



Question ID : 9895806252
Chosen Option : 4

Q.5 In the following number series, two numbers have been put within brackets. Study the series carefully and select the correct alternative with respect to the series.

0, 7, 26, 63, (124), 215, 342, (512)

Ans ✓ 1.

The first bracketed number (from the left) is correct and the second is incorrect.

✗ 2.

The first bracketed number (from the left) is incorrect and the second is correct.

✗ 3. Both the bracketed numbers are incorrect.

✗ 4. Both the bracketed numbers are correct.

Question ID : 9895806249
Chosen Option : 1

Q.6 Select the option that most closely resembles the mirror image of the given word when the mirror is placed vertically.

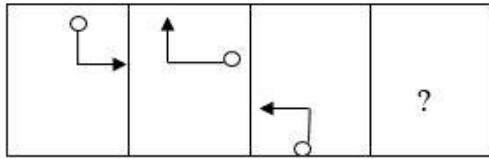
UNION

Ans ✗ 1. NOINU
✗ 2. ∩ HIOH
✓ 3. HIOIHU
✗ 4. HIOIH ∩

Question ID : 9895806253
Chosen Option : 1

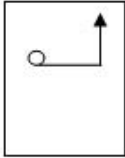
Q.7

Select the figure that will come next in the following series.

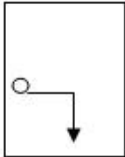


Ans

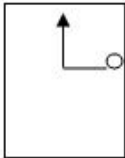
1.



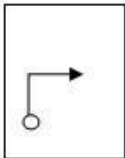
2.



3.



4.



Question ID : 9895806250
Chosen Option : 2

Q.8 Select the number that DOES NOT belong to the following group.

1, 2, 5, 12, 20, 32, 45

Ans 1. 45

2. 32

3. 20

4. 12

Question ID : 9895806245
Chosen Option : 3

Q.9 In a private school, there were five teachers. Abi and Geetha were teaching French and English. Harini and Geetha were teaching English and Science. Diva and Abi were teaching Maths and French. Hema and Geetha were teaching Social Science and French.

Which subject is taught by maximum number of teachers?

Ans 1. Science

2. Maths

3. French

4. English

Question ID : 9895806240
Chosen Option : 3

Q.1 L, M, N and O are to be seated in a row. However, N and O cannot be together. Moreover, M cannot be in the third place from the left. L and M are sitting beside each other. Considering the seating from left to right which of the following must be true?



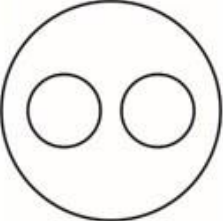
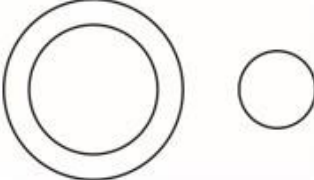
- Ans
1. N is at the third place.
 2. L is at the third place.
 3. N is at the first place.
 4. O is at the third place.

Question ID : 9895806241
Chosen Option : 1

Q.1 Select the Venn diagram that best represents the given set of classes.

Animals, Reptiles, Snakes

Ans

1. 
2. 
3. 
4. 

Question ID : 9895806255
Chosen Option : 4

Q.1 Four numbers have been given out of which three are alike in some manner, while one is different. Choose the odd one.

- Ans
1. 250
 2. 95
 3. 159
 4. 150

Question ID : 9895806247
Chosen Option : 3

Q.1
3

Given is a statement, followed by four conclusions. Read the statement carefully and decide which of the conclusions logically follow(s) from the given statement.

Statement:

This book can help because all good books help.

Conclusions:

- I. This is not a good book.
- II. This is a good book.
- III. No good book helps.
- IV. Some good books help.

- Ans**
- 1. Only conclusion I follows.
 - 2. All the conclusions follow.
 - 3. Only conclusion II follows.
 - 4. Both conclusions III and IV follow.

Question ID : 9895806243
Chosen Option : 3

Q.1 Five friends are sitting in a circle, all facing the centre. Mohan is to the left of Raju. Vinith is to the right of Arjun and between Arjun and Naveen. Who is between Raju and Naveen?

- Ans**
- 1. Arjun and Vinith
 - 2. Vinith
 - 3. Arjun
 - 4. Mohan

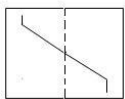
Question ID : 9895806239
Chosen Option : 2

Q.1 Four words have been given out of which three are alike in some manner, while one is different. Choose the odd one.

- Ans**
- 1. Necklace
 - 2. Bracelet
 - 3. Jewellery
 - 4. Anklet

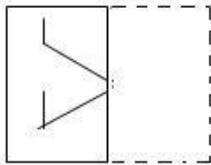
Question ID : 9895806232
Chosen Option : 3

Q.1 A square transparent sheet with a pattern is given. How will the pattern appear when the transparent sheet is folded along the dotted line?

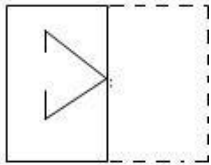


- Ans**
- 1.

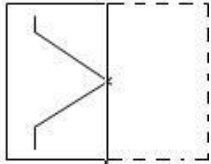
✗ 2.



✗ 3.



✓ 4.



Question ID : 9895806254
Chosen Option : 4

Q.1
7 Which two signs need to be interchanged to make the given equation correct?

$$3 \div 2 - 4 \times 5 + 5 = 1$$

Ans ✗ 1. + and -

✗ 2. × and -

✗ 3. ÷ and ×

✓ 4. + and ÷

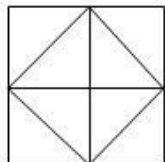
Question ID : 9895806248
Chosen Option : 3

Q.1
8 Select the option in which the given figure is embedded.

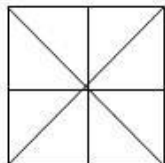


Ans

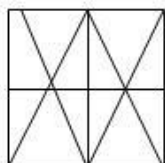
✗ 1.




✗ 2.



✓ 3.



4.



Question ID : 9895806251
Chosen Option : 4

Q.1 Select the option that is related to the third term in the same way as the second term is related to the first term.

9

Angle : Radian :: Mass : _____.

Ans

1. Kilogram

2. Litre

3. Degree

4. Height

Question ID : 9895806236
Chosen Option : 1

Q.2 Select the correct option that will fill in the blank and complete the series.

0

5, 22, 39, 56, ____?

Ans

1. 89

2. 76

3. 73

4. 87

Question ID : 9895806244
Chosen Option : 3

Q.2 Identify the odd one from the following.

1

Ans

1. dFh

2. gHj

3. uWy

4. rTv

Question ID : 9895806233
Chosen Option : 2

Q.2 If CENTRAL is coded as BFMUQBK, then FRIENDS will be coded as _____.

2

Ans

1. ESHEMER

2. ESHFMER

3. ESHENER

4. ESHFNER

Question ID : 9895806238
Chosen Option : 2

Q.2 Four pairs of words have been given, out of which three are alike in some manner, while one is different. Choose out the

3

odd one.

Ans

1.

- 2. Saw : Carpenter
- 3. Sculptor : Chisel
- 4. Doctor : Stethoscope

Question ID : 9895806234
Chosen Option : 3

Q.2 Select the option that is related to the third number in the same way as the second number is related to the first number.

4

7 : 50 :: 13 : ____?

- Ans
- 1. 160
 - 2. 144
 - 3. 170
 - 4. 169

Question ID : 9895806246
Chosen Option : 4

Q.2 Select the term that will come next in the following series.

5

YCL, MQZ, _____, OSB

- Ans
- 1. AEN
 - 2. BFQ
 - 3. ADM
 - 4. BEM

Question ID : 9895806231
Chosen Option : 1

Q.2 Which of the following statements about 'Biological Magnification' is FALSE?

6

- Ans
- 1.

Its maximum concentration is at the top level of the food chain.

- 2.

Its maximum concentration is at the bottom level of the food chain.

- 3. It differs depending on the level of ecosystem.

- 4.

The chemicals enter the food chain through absorption from water or soil.

Question ID : 9895806437
Chosen Option : 4

Q.2 The first Mughal emperor, Babur came to India from:

7

- Ans
- 1. Syria
 - 2. Greece
 - 3. Ferghana
 - 4. Persia

Question ID : 9895806432
Chosen Option : 3

Q.2
8 Banks were nationalised in India through an ordinance passed in the year:

- Ans
- 1. 1976
 - 2. 1963
 - 3. 1969
 - 4. 1954

Question ID : 9895806447
Chosen Option : 2

Q.2
9 Who presented the first Union Budget of Independent India?

- Ans
- 1. NV Gadgil
 - 2. Maulana Azad
 - 3. CD Deshmukh
 - 4. RK Shanmukham Chetty

Question ID : 9895806445
Chosen Option : 3

Q.3
0 _____ is the oldest mountain range in the Indian subcontinent.

- Ans
- 1. Himalaya
 - 2. Vindhya
 - 3. Aravali
 - 4. Satpura

Question ID : 9895806434
Chosen Option : 3

Q.3
1 'Sevasadan', 'Karmabhoomi' and 'Gaban' are some of the masterpieces of which Hindi writer?

- Ans
- 1. Bhisham Sahni
 - 2. Premchand
 - 3. Harishchandra
 - 4. Ramdhari Singh 'Dinkar'

Question ID : 9895806450
Chosen Option : 3

Q.3
2 As of January 2019, the Chief Minister of Chhattisgarh is:

- Ans
- 1. Shiv Dahariya
 - 2. Bhupesh Baghel
 - 3. Kamal Nath
 - 4. Kawasi Lakhma

Question ID : 9895806448
Chosen Option : 2

Q.3
3 Which of the following diseases is caused by bacteria?

- Ans
- 1.

2. Chicken Pox

3. Small Pox

4. Tuberculosis

Question ID : 9895806440
Chosen Option : 1

Q.3
4 Which of the following is NOT an amphibian?

Ans 1. Frog

2. Tortoise

3. Salamander

4. Toad

Question ID : 9895806439
Chosen Option : 4

Q.3
5 Life on earth began in the oceans almost _____ years ago.

Ans 1. 1 billion

2. 100 million

3. 500 million

4. 3.5 billion

Question ID : 9895806436
Chosen Option : 4

Q.3
6 Which chemical is widely used to unclog drains and sinks?

Ans 1. Sodium Chloride

2. Nitrogen Hydroxide

3. Hydrogen Peroxide

4. Sodium Hydroxide

Question ID : 9895806441
Chosen Option : 1

Q.3
7 The concept of five - year plans in the Constitution of India is borrowed from _____.

Ans 1. Russia

2. England

3. The United States

4. Germany

Question ID : 9895806443
Chosen Option : 1

Q.3
8 The Fiscal Year in India is considered between:

Ans 1. 1 April – 31 March

2. 1 January – 31 December

3. 1 July – 30 June
 4. 31 March – 1 April

Question ID : 9895806446
Chosen Option : 1

Q.3
9 Which state hosts the annual Surajkund Crafts fair?

- Ans
- 1. Rajasthan
 - 2. Uttar Pradesh
 - 3. Punjab
 - 4. Haryana

Question ID : 9895806454
Chosen Option : 3

Q.4
0 Which of the following statements with respect to Article 22 of the Constitution and Criminal Law on fundamental rights of an arrested person is NOT correct?

- Ans
- 1.
The Right to be informed at the time of arrest of the offence for which the person is being arrested
 - 2.
A boy under 15 years of age and women cannot be called to the police station only for questioning
 - 3.
The Right to be presented before a magistrate within 24 hours of arrest
 - 4.
Confessions made in police custody can be used as evidence against the accused

Question ID : 9895806444
Chosen Option : 3

Q.4
1 Which team has won the Ranji Trophy maximum number of times?

- Ans
- 1. Saurashtra
 - 2. Tamil Nadu
 - 3. Mumbai
 - 4. Vidarbha

Question ID : 9895806451
Chosen Option : 4

Q.4
2 Which country ranks first in the 'Per Capita' Summer Olympic medals tally?

- Ans
- 1. Netherlands
 - 2. Finland
 - 3. Japan
 - 4. Hungary

Question ID : 9895806452
Chosen Option : 1

Q.4
3 The Brahmaputra river is called 'Tsangpo' in Tibet. What is it called in Bangladesh?

- Ans
- 1.

- 2. Padma
- 3. Karnaphuli
- 4. Jamuna

Question ID : 9895806435
Chosen Option : 3

Q.4
4 Chandragupta Maurya established the Mauryan Empire by defeating the:

- Ans
- 1. Nandas
 - 2. Chalukyas
 - 3. Pallavas
 - 4. Shungas

Question ID : 9895806431
Chosen Option : 3

Q.4
5 Victoria Memorial is located in:

- Ans
- 1. Lahore
 - 2. Mumbai
 - 3. Kolkata
 - 4. New Delhi

Question ID : 9895806453
Chosen Option : 1

Q.4
6 'Gidda' is a dance form of which state?

- Ans
- 1. Punjab
 - 2. Assam
 - 3. West Bengal
 - 4. Odisha

Question ID : 9895806455
Chosen Option : 4

Q.4
7 Who was the first Indian woman president of Indian National Congress?

- Ans
- 1. Vijaya Lakshmi Pandit
 - 2. Sarojini Naidu
 - 3. Sucheta Kriplani
 - 4. Aruna Asaf Ali

Question ID : 9895806433
Chosen Option : 2

Q.4
8 Which of the following statements is not a good argument in favour of a democracy?

- Ans
- 1. Democracies are more accountable to the people
 - 2. Democracies have better resolutions of conflicts

3. People feel free and equal in a democracy
4. Democracies are more prosperous than others

Question ID : 9895806442
Chosen Option : 4

Q.4
9 Which of the following statements about sound is FALSE?

Ans 1. The audible range of an average human is 20 Hz – 20 kHz.

2.

The speed of sound remains uniform irrespective of the temperature or medium.

3. Sound travels as a longitudinal wave.

4. Sound cannot travel in a vacuum.

Question ID : 9895806438
Chosen Option : 3

Q.5
0 The Dadasaheb Phalke Award announced in 2018 was awarded to:

Ans 1. Late Yash Chopra

2. Late Rajesh Khanna

3. Late Shashi Kapoor

4. Late Vinod Khanna

Question ID : 9895806449
Chosen Option : 2

Q.5
1 If the interest on money be 1 paisa per rupee per month, what is the rate per cent per annum?

Ans 1. 12%

2. 15%

3. 10%

4. $10\frac{1}{2}\%$

Question ID : 9895806344
Chosen Option : 1

Q.5
2 The median of the data 28, 31, 42, 37, 26, 34, 18, 23 is:

Ans 1. 30

2. 29.5

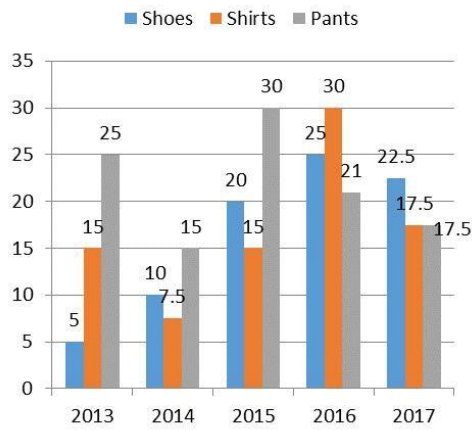
3. 31.5

4. 28

Question ID : 9895806337
Chosen Option : 2

Q.5
3

Study the following graph which shows the production (in thousands) of different items, and answer these questions.



The ratio between the number of pants produced by the company in the year 2014, 2015 and 2016 respectively is:

- Ans 1. 3 : 4 : 6
 2. 5 : 10 : 7
 3. 1 : 2 : 3
 4. 3 : 4 : 5

Question ID : 9895806354
 Chosen Option : 4

Q.5
 4 The area of an equilateral triangle is 173 cm^2 then of the perimeter the equilateral triangle (use $\sqrt{3} = 1.73$) is:

- Ans 1. 40 cm
 2. 60 cm
 3. 100 cm
 4. 20 cm

Question ID : 9895806350
 Chosen Option : 2

Q.5
 5 A pen drive was sold at a price after giving two successive discounts of 30% and 20%. If the selling price of the item was ₹ 560, then what was the marked price of the pen drive?

- Ans 1. ₹ 1000
 2. ₹ 840
 3. ₹ 1140
 4. ₹ 1280

Question ID : 9895806343
 Chosen Option : 2

Q.5
 6 A discount of 30% on the marked price of a shirt enables a man to purchase a tie also, which costs him ₹ 210. How much did the man pay for the shirt?

- Ans 1. ₹ 540
 2. ₹ 490
 3. ₹ 630
 4. ₹ 700

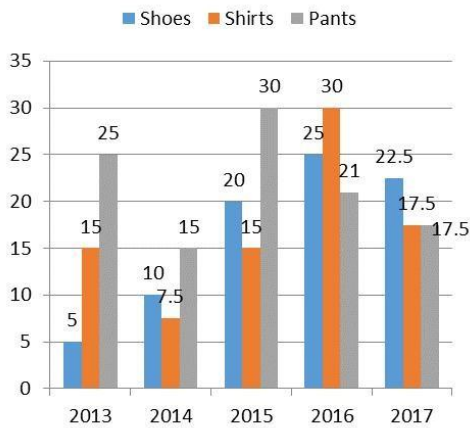
Question ID : 9895806336
 Chosen Option : 2

Q.5 The cost price of 120 bags is ₹ 15 each. 40 of them were sold for ₹ 18 each. At what price should the remaining be sold in order to get an overall profit of ₹ 4 per bag?

- Ans
- 1. ₹ 19.5
 - 2. ₹ 22.5
 - 3. ₹ 16
 - 4. ₹ 20

Question ID : 9895806339
Chosen Option : 2

Q.5 Study the following graph which shows the production (in thousands) of different items, and answer these questions.



The total number of all products produced by the company in the year 2014 and 2016 together is:

- Ans
- 1. 105700
 - 2. 108500
 - 3. 1075
 - 4. 10750

Question ID : 9895806353
Chosen Option : 4

Q.5 Seven persons have 20, 30, 40, 50, 60, 70 and 80 chocolates with them. If each of them is given 5 chocolates additionally, what will be the average number of chocolates with them?

- Ans
- 1. 50
 - 2. 55
 - 3. 45
 - 4. 60

Question ID : 9895806334
Chosen Option : 2

Q.6 A beats B by 125 m in a kilometer race. Find B's speed if A's speed is 16 m/sec.:

- Ans
- 1. 18 m/sec
 - 2. 14 m/sec
 - 3. 7 m/sec
 - 4. 21 m/sec

Question ID : 9895806349
Chosen Option : 2

Q.6 The ratio of the present ages of Meera and Sheela is 9 : 5. After 8 years Sheela would reach the present age of Meera.

1 What is the present ages (in years) of Sheela?

- Ans
- 1. 18
 - 2. 10
 - 3. 5
 - 4. 9

Question ID : 9895806341
Chosen Option : 1

Q.6 The difference between simple interest and compound interest on ₹ 2500 at 4% per annum for two years is (in ₹):

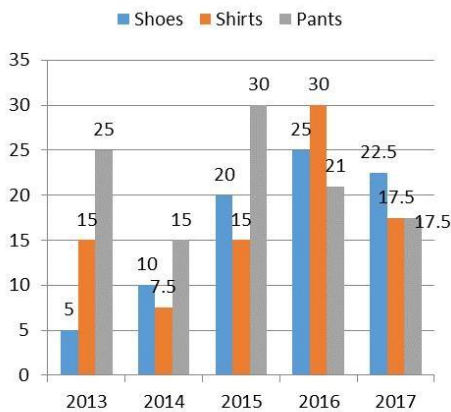
2

- Ans
- 1. ₹ 40
 - 2. ₹ 4
 - 3. ₹ 45
 - 4. ₹ 14

Question ID : 9895806345
Chosen Option : 1

Q.6 Study the following graph which shows the production (in thousands) of different items, and answer these questions.

3



The difference between the total number of Shoes and Shirts produced by the company in the year 2016 and the number of Pants produced by the company in the year 2014 is:

- Ans
- 1. 40000
 - 2. 35000
 - 3. 32000
 - 4. 38000

Question ID : 9895806355
Chosen Option : 2

Q.6 Suresh sells a pen at ₹ 120 for $33\frac{1}{3}\%$ profit. At what price should he sell it to gain 40%?

4

- Ans
- 1. ₹ 160
 - 2. ₹ 120
 - 3. ₹ 140
 - 4. ₹ 126

Question ID : 9895806340
Chosen Option : --

Q.6 If 12 men or 20 women can do a work in 54 days, then in how many days can 9 men and 12 women together do the work?

- Ans
- 1. 38
 - 2. 32
 - 3. 40
 - 4. 35

Question ID : 9895806347
Chosen Option : 1

Q.6 What should come in place of the question mark (?) in the following question?

$$1 - [5 - \{2 + (-5 + 6 - 2)2\}] = ?$$

- Ans
- 1. 0
 - 2. 2
 - 3. -2
 - 4. -4

Question ID : 9895806333
Chosen Option : --

Q.6 A started running towards north direction at 6:00 a.m. B also started running towards north direction at 10:00 a.m. At what time will they meet if the speeds of A and B are in the ratio 3 : 7 and they started from the same point?

- Ans
- 1. 1 p.m.
 - 2. 2 p.m.
 - 3. 1:30 p.m.
 - 4. 12:30 p.m.

Question ID : 9895806348
Chosen Option : --

Q.6 The area of the base of a right circular cone is $\frac{1408}{7}$ cm² and its height is 6 cm. Taking $\pi = \frac{22}{7}$, the curved surface area of the cone is:

- Ans
- 1. $\frac{1670}{7}$ cm²
 - 2. $\frac{1067}{7}$ cm²
 - 3. $\frac{1760}{7}$ cm²
 - 4. $\frac{7160}{7}$ cm²

Question ID : 9895806352
Chosen Option : --

Q.6 The perimeter (in metres) of a semicircle is numerically equal to its area (in square metres). The length of its diameter is (Take $\pi = \frac{22}{7}$)

- Ans
- 1. $6\frac{6}{11}$ meters
 - 2. $3\frac{3}{11}$ meters
 - 3. $6\frac{2}{11}$ meters

4. $5\frac{6}{11}$ meters

Question ID : 9895806351
Chosen Option : --

Q.7
0 There are two numbers a^2 and 9. Their mean proportion is b, then

$$(a^2 + b^2) : (a^2 - b^2) = ?$$

- Ans 1. 5 : 4
 2. 3 : 4
 3. 3 : 2
 4. 1 : 1

Question ID : 9895806342
Chosen Option : 1

Q.7
1 The average number of chocolates with six children is six. If another child joined them the average number of chocolates with the seven children will become 7. What is the number of chocolates with the seventh child?

- Ans 1. 14
 2. 11
 3. 12
 4. 13

Question ID : 9895806335
Chosen Option : --

Q.7
2 A and B working together can complete a job in 30 days. The ratio of their efficiencies is 3 : 2. In how many days can the faster person complete the job?

- Ans 1. 50
 2. 30
 3. 40
 4. 60

Question ID : 9895806346
Chosen Option : 1

Q.7
3 What should come in place of the question mark (?) in the following question?

$$2 - [6 - \{3 + (-4 + 5 + 1) \times 8\} + 12] = ?$$

- Ans 1. 4
 2. 2
 3. 3
 4. 1

Question ID : 9895806332
Chosen Option : --

Q.7
4 Find the least square number which is divisible by 4, 8, 2, 6 and 12?

- Ans 1. 36
 2. 24
 3. 48
 4. 144

Question ID : 9895806331
Chosen Option : --

Q.7 In a class of 80 students, 60% passed in Economics and only 20% not passed in History. The maximum number of students who can neither passed in Economics nor in History is:

- Ans
- 1. 20
 - 2. 12
 - 3. 24
 - 4. 16

Question ID : 9895806338
Chosen Option : --

Section : English Language

Q.1 Select the most appropriate option to substitute the underlined segment in the given sentence. If there is no need to substitute it, select No improvement.

Even if you did not know where I was, you can always have telephoned me to ask.

- Ans
- 1. you could always have telephoned me
 - 2. No improvement
 - 3. you will always have telephoned me
 - 4. you should always have telephoned me

Question ID : 9895806106
Chosen Option : 4

Comprehension:

In the following passage some words have been deleted. Fill in the blanks with the help of the alternatives given.

Women have _____ (1) been held in high esteem in our country. During the Vedic period they _____ (2) important positions in social and religious _____ (3) Without women, religious ceremonies were _____ (4) incomplete. Our mythological and philosophical writings bear witness to the fact that the tradition of having high regard for women was long _____ (5)

SubQuestion No : 2

Q.2 Select the most appropriate option that will fill in the blank number 1.

- Ans
- 1. never
 - 2. seldom
 - 3. always
 - 4. hardly

Question ID : 9895806111
Chosen Option : 1

Comprehension:

In the following passage some words have been deleted. Fill in the blanks with the help of the alternatives given.

Women have _____ (1) been held in high esteem in our country. During the Vedic period they _____ (2) important positions in social and religious _____ (3) Without women, religious ceremonies were _____ (4) incomplete. Our mythological and philosophical writings bear witness to the fact that the tradition of having high regard for women was long _____ (5)

SubQuestion No : 3

Q.3 Select the most appropriate option that will fill in the blank number 2.

- Ans
- 1. occupied
 - 2. developed
 - 3. demanded
 - 4. offered

Question ID : 9895806112
Chosen Option : 4

Comprehension:

In the following passage some words have been deleted. Fill in the blanks with the help of the alternatives given.

Women have _____ (1) been held in high esteem in our country. During the Vedic period they _____ (2) important positions in social and religious _____ (3) Without women, religious ceremonies were _____ (4) incomplete. Our mythological and philosophical writings bear witness to the fact that the tradition of having high regard for women was long _____ (5)

SubQuestion No : 4

Q.4 Select the most appropriate option that will fill in the blank number 3.

- Ans
- 1. books
 - 2. literature
 - 3. life
 - 4. thoughts

Question ID : 9895806113
Chosen Option : 2

Comprehension:

In the following passage some words have been deleted. Fill in the blanks with the help of the alternatives given.

Women have _____ (1) been held in high esteem in our country. During the Vedic period they _____ (2) important positions in social and religious _____ (3) Without women, religious ceremonies were _____ (4) incomplete. Our mythological and philosophical writings bear witness to the fact that the tradition of having high regard for women was long _____ (5)

SubQuestion No : 5

Q.5 Select the most appropriate option that will fill in the blank number 4.

- Ans
- 1. accepted
 - 2. believed
 - 3. performed
 - 4. considered

Question ID : 9895806114
Chosen Option : 3

Comprehension:

In the following passage some words have been deleted. Fill in the blanks with the help of the alternatives given.

Women have _____ (1) been held in high esteem in our country. During the Vedic period they _____ (2) important positions in social and religious _____ (3) Without women, religious ceremonies were _____ (4) incomplete. Our mythological and philosophical writings bear witness to the fact that the tradition of having high regard for women was long _____ (5)

SubQuestion No : 6

Q.6 Select the most appropriate option that will fill in the blank number 5.

- Ans
- 1. awaited
 - 2. maintained
 - 3. valued
 - 4. discontinued

Question ID : 9895806115
Chosen Option : 3

Q.7 From the given options, identify the segment in the sentence which contains the grammatical error.

When questioned about their laziness, almost all the boys gave the same excuse, 'We all are tired.'

- Ans
- 1. When questioned
 - 2. almost all the boys
 - 3. 'We all are tired.'
 - 4. about their laziness

Question ID : 9895806103
Chosen Option : 2

Q.8 Select the most appropriate option to fill in the blank.

Macbeth is the tragedy of a man who was _____ with great qualities.

- Ans
- 1. endowed
 - 2. conferred
 - 3. empowered
 - 4. advantaged

Question ID : 9895806108
Chosen Option : 4

Q.9 Select the most appropriate option to fill in the blank.

All the respondents should express their _____ views in this questionnaire.

- Ans
- 1. candid
 - 2. confident
 - 3. convincing
 - 4. contrary

Question ID : 9895806109
Chosen Option : 3

Q.1 Select the option that means the same as the given idiom.

To split hairs

- Ans
- 1. To occupy one's time in dressing
 - 2. To stop the argument in between
 - 3. To get angry about someone's fashion
 - 4. To engage in discussing irrelevant details

Question ID : 9895806121
Chosen Option : 3

Q.1 Select the most appropriate word to fill in the blank.

The government should provide attractive tax _____ for the salaried class.

- Ans
- 1. structures
 - 2. documents
 - 3. suggestions
 - 4. bids

Question ID : 9895806126
Chosen Option : 2

Q.1 Select the most appropriate option to substitute the underlined segment in the given sentence. If there is no need to substitute it, select No improvement.

In spite of his illness, the man run a few yards before withdrawing from the race.

- Ans
- 1. ran a few yards before withdrew from
 - 2. ran a few yards before withdrawing from
 - 3. No improvement
 - 4. running a few yards before withdrawing from

Question ID : 9895806105
Chosen Option : --

Q.1
3

Select the word which means the same as the group of words given.

Organisms that live on another

- Ans
- 1. Bacteria
 - 2. Microbes
 - 3. Viruses
 - 4. Parasites

Question ID : 9895806122
Chosen Option : --

Q.1 From the given options, identify the segment in the sentence which contains the grammatical error.

4

The person at the counter when filling up my details asked me how many languages did I know.

- Ans
- 1. did I know
 - 2. at the counter
 - 3. filling up my details
 - 4. how many languages

Question ID : 9895806102
Chosen Option : --

Q.1 Select the option that means the same as the given idiom.

5

To read between the lines

- Ans
- 1. To ask someone to read every line
 - 2. To understand more than actual words
 - 3. To look for the meaning of every word
 - 4. To understand the dictionary meanings

Question ID : 9895806120
Chosen Option : --

Q.1 Select the correctly spelt word.

6

- Ans
- 1. Scissors
 - 2. Scissors
 - 3. Scissars
 - 4. Sissors

Question ID : 9895806124
Chosen Option : --

Q.1 Select the correctly spelt word.

7

- Ans
- 1. Allteration
 - 2. Altaration
 - 3. Alterashion
 - 4. Alteration

Question ID : 9895806125

Chosen Option : --

Q.1 From the given options, identify the segment in the sentence which contains the grammatical error.

8

Soon I was informed by reliable sources that their parents had no any responsibilities towards the family.

Ans

1. towards the family
2. by reliable sources
3. Soon I was informed
4. no any responsibilities

Question ID : 9895806104

Chosen Option : --

Q.1 Select the synonym of the given word.

9

CONFLUENCE

Ans

1. Junction
2. Flow
3. Diversion
4. Stream

Question ID : 9895806117

Chosen Option : --

Q.2 Select the antonym of the given word.

0

Genuine

Ans

1. True
2. False
3. Frank
4. Actual

Question ID : 9895806119

Chosen Option : --

Q.2 Select the most appropriate option to substitute the underlined segment in the given sentence. If there is no need to substitute it, select No improvement.

1

The City Development Council resolved at a recent meeting to take steps to controlling pollution immediately.

Ans

1. to take steps to control pollution immediately
2. No improvement
3. to take steps of control pollution immediately
4. to take steps for control pollution immediately

Question ID : 9895806107

Chosen Option : --

Q.2 Select the word which means the same as the group of words given.

2

A short stay at a place

Ans

- 1.

- 2. Lodge
- 3. Sojourn
- 4. Trip

Question ID : 9895806123
Chosen Option : --

Q.2
3 Select the synonym of the given word.

PSEUDONYM

- Ans
- 1. Family name
 - 2. Alias
 - 3. Namesake
 - 4. First name

Question ID : 9895806116
Chosen Option : --

Q.2
4 Select the most appropriate word to fill in the blank.

The Director has still not given his _____ to conduct the survey of natural resources.

- Ans
- 1. compliance
 - 2. projection
 - 3. consent
 - 4. request

Question ID : 9895806127
Chosen Option : --

Q.2
5 Select the antonym of the given word.

Interruption

- Ans
- 1. Disruption
 - 2. Hinderance
 - 3. Continuity
 - 4. Temporary

Question ID : 9895806118
Chosen Option : --

Section : Hindi Language

Q.1 दिए गए शब्द के पर्यायवाची शब्द का चयन करें।

रावण

- Ans
- 1. चतुरानन
 - 2. पंचानन
 - 3. दशानन

4. पीतांबर

Question ID : 9895805913
Chosen Option : --

Q.2 दिए गए वाक्य का वह भाग ज्ञात करें जिसमें कोई त्रुटि है।

समाचार पत्र समाचार का भंडार तो हैं ही, इसके साथ इसके एक उपयोग और भी है।

- Ans 1. समाचार पत्र
2. समाचार का भंडार तो हैं ही,
3. इसके साथ
4. इसके एक उपयोग और भी है।

Question ID : 9895805895
Chosen Option : --

Q.3 दिए गए वाक्य में रेखांकित खंड को प्रतिस्थापित करने के लिए उपयुक्त विकल्प का चयन करें।

एकता और संगठन का भावना जागृत करने के लिए उन्होंने अनेक प्रयास किए।

- Ans
1. संगठन की भावना
2. संगठन को भावना
3. संगठन पर भावना
4. संगठन से भावना

Question ID : 9895805897
Chosen Option : --

Comprehension:

निम्नलिखित गद्यांश के रिक्त स्थानों की पूर्ति गद्यांश के नीचे दिए गए प्रश्नों के अनुसार कीजिए -

प्रसन्न रहना ईश्वर की सर्वोपरि भक्ति है। प्रसन्नता मानव को ईश्वर का दिया हुआ अनुपम उपहार है। आज के व्यक्ति को प्रसन्नता व मानसिक शांति की इसलिए _____ (1) है क्योंकि अधिकांश मनुष्य अपने जीवन से _____ (2) है। खुश रहना सरल नहीं है। व्यर्थ ही भविष्य की _____ (3) बनाते रहना और अतीत की अप्रिय घटनाओं में खोए रहना प्रसन्नता प्राप्ति में _____ (4) है। प्रसन्न रहकर हम _____ (5) के कृपा पात्र बन सकते हैं।

SubQuestion No : 4

Q.4 गद्यांश में संकेतित रिक्त स्थान (1) के लिए उपयुक्त शब्द होगा।

- Ans
1. तृष्णा
2. क्षुधा

✗ 3. वासना

✓ 4. आवश्यकता

Question ID : 9895805905

Chosen Option : --

Comprehension:

निम्नलिखित गद्यांश के रिक्त स्थानों की पूर्ति गद्यांश के नीचे दिए गए प्रश्नों के अनुसार कीजिए -

प्रसन्न रहना ईश्वर की सर्वोपरि भक्ति है। प्रसन्नता मानव को ईश्वर का दिया हुआ अनुपम उपहार है। आज के व्यक्ति को प्रसन्नता व मानसिक शांति की इसलिए _____ (1) है क्योंकि अधिकांश मनुष्य अपने जीवन से _____ (2) है। खुश रहना सरल नहीं है। व्यर्थ ही भविष्य की _____ (3) बनाते रहना और अतीत की अप्रिय घटनाओं में खोए रहना प्रसन्नता प्राप्ति में _____ (4) है। प्रसन्न रहकर हम _____ (5) के कृपा पात्र बन सकते हैं।

SubQuestion No : 5

Q.5 गद्यांश में संकेतित रिक्त स्थान (2) के लिए उपयुक्त शब्द होगा।

Ans

1. मित्रता

2. प्रशंसा

✗ 3. सहायता

✗ 4. अप्रसन्न

Question ID : 9895805906

Chosen Option : --

Comprehension:

निम्नलिखित गद्यांश के रिक्त स्थानों की पूर्ति गद्यांश के नीचे दिए गए प्रश्नों के अनुसार कीजिए -

प्रसन्न रहना ईश्वर की सर्वोपरि भक्ति है। प्रसन्नता मानव को ईश्वर का दिया हुआ अनुपम उपहार है। आज के व्यक्ति को प्रसन्नता व मानसिक शांति की इसलिए _____ (1) है क्योंकि अधिकांश मनुष्य अपने जीवन से _____ (2) है। खुश रहना सरल नहीं है। व्यर्थ ही भविष्य की _____ (3) बनाते रहना और अतीत की अप्रिय घटनाओं में खोए रहना प्रसन्नता प्राप्ति में _____ (4) है। प्रसन्न रहकर हम _____ (5) के कृपा पात्र बन सकते हैं।

SubQuestion No : 6

Q.6 गद्यांश में संकेतित रिक्त स्थान (3) के लिए उपयुक्त शब्द होगा।

Ans

- ✓ 1. पकवान
- ✗ 2. योजनाएँ
- ✗ 3. लेख
- ✗ 4. कपड़े

Question ID : 9895805907
Chosen Option : --

Comprehension:

निम्नलिखित गद्यांश के रिक्त स्थानों की पूर्ति गद्यांश के नीचे दिए गए प्रश्नों के अनुसार कीजिए -

प्रसन्न रहना ईश्वर की सर्वोपरि भक्ति है। प्रसन्नता मानव को ईश्वर का दिया हुआ अनुपम उपहार है। आज के व्यक्ति को प्रसन्नता व मानसिक शांति की इसलिए _____ (1) है क्योंकि अधिकांश मनुष्य अपने जीवन से _____ (2) है। खुश रहना सरल नहीं है। व्यर्थ ही भविष्य की _____ (3) बनाते रहना और अतीत की अप्रिय घटनाओं में खोए रहना प्रसन्नता प्राप्ति में _____ (4) है। प्रसन्न रहकर हम _____ (5) के कृपा पात्र बन सकते हैं।

SubQuestion No : 7

Q.7 गद्यांश में संकेतित रिक्त स्थान (4) के लिए उपयुक्त शब्द होगा।

- Ans
- ✗ 1. आगे
 - ✗ 2. बाधक
 - ✓ 3. पीछे
 - ✗ 4. ऊपर

Question ID : 9895805908
Chosen Option : --

Comprehension:

निम्नलिखित गद्यांश के रिक्त स्थानों की पूर्ति गद्यांश के नीचे दिए गए प्रश्नों के अनुसार कीजिए -

प्रसन्न रहना ईश्वर की सर्वोपरि भक्ति है। प्रसन्नता मानव को ईश्वर का दिया हुआ अनुपम उपहार है। आज के व्यक्ति को प्रसन्नता व मानसिक शांति की इसलिए _____ (1) है क्योंकि अधिकांश मनुष्य अपने जीवन से _____ (2) है। खुश रहना सरल नहीं है। व्यर्थ ही भविष्य की _____ (3) बनाते रहना और अतीत की अप्रिय घटनाओं में खोए रहना प्रसन्नता प्राप्ति में _____ (4) है। प्रसन्न रहकर हम _____ (5) के कृपा पात्र बन सकते हैं।

SubQuestion No : 8

Q.8

गद्यांश में संकेतित रिक्त स्थान (5) के लिए
उपयुक्त शब्द होगा।

Ans

1. ईश्वर
- ✗ 2. सहायक
3. मंत्री
4. प्रधानमंत्री

Question ID : 9895805909
Chosen Option : --

Q.9 निम्नलिखित में से उस विकल्प का चयन करें जो 'चिकना घड़ा' मुहावरे का अर्थ व्यक्त करता है।

Ans

1. निर्लज्ज व्यक्ति
2. मजबूत घड़ा
3. घड़ा चिकना करके पानी भरना
4. घड़े का चिकना होना

Question ID : 9895805915
Chosen Option : --

Q.1 दिए गए वाक्य में रेखांकित खंड को प्रतिस्थापित करने के लिए उपयुक्त विकल्प का चयन करें।

रोगी के आस-पास हमें भीड़ नहीं लगाना चाहिए।

Ans

1. भीड़ नहीं लगानी चाहिए।
2. भीड़ मत लगानी चाहिए।
3. भीड़ नहीं लगाने चाहिए।
4. भीड़ लगानी मत चाहिए।

Question ID : 9895805899
Chosen Option : --

Q.1 निम्नलिखित में से उस विकल्प का चयन करें जो 'दाल में कुछ काला होना' मुहावरे का अर्थ व्यक्त करता है।

Ans

- ✗ 1. दाल में कुछ गिर जाना
2. दाल का काला होना
3. सत्यता प्रमाणित होना
4. आशंका/संदेह होना

Question ID : 9895805914
Chosen Option : --

Q.1 दिए गए शब्द का विलोम चुनें।

सुधा

Ans

- 1.

- ✓ 2. गरल
3. अमृत
✗ 4. जल

Question ID : 9895805910
Chosen Option : --

Q.1
3 दिए गए शब्द का विलोम चुनें।

नित्य

- Ans ✗ 1. वार
2. अनित्य
3. रोज
✗ 4. वासर

Question ID : 9895805911
Chosen Option : --

Q.1
4 दिए गए वाक्य में रेखांकित खंड को प्रतिस्थापित करने के लिए उपयुक्त विकल्प का चयन करें।

अपनी गलतियों को समझते हुए भी वह उसे सुधारते का प्रयास नहीं करता।

- Ans ✗ 1. सुधारने का प्रयास
2. सुधारने की प्रयास
3. सुधारने का प्रयास
4. सुधारने का प्रयास

Question ID : 9895805898
Chosen Option : --

Q.1
5 रिक्त स्थान को भरने के लिए उपयुक्त शब्द का चयन करें।

उसे चोट लगने पर खून _____ लगा।

- Ans 1. चलने
2. भागने
3. बहने
4. जाने

Question ID : 9895805901
Chosen Option : --

Q.1
6 दिए गए शब्द के पर्यायवाची शब्द का चयन करें।

आत्मज

- Ans 1.

2. पत्नी
3. पिता
4. पुत्री

Question ID : 9895805912
Chosen Option : --

Q.1
7 रिक्त स्थान को भरने के लिए उपयुक्त शब्द का चयन करें।

वह कक्षा की _____ जा रहा है।

- Ans 1. उत्तर
2. और
3. ओर
4. दिशा

Question ID : 9895805900
Chosen Option : --

Q.1
8 रिक्त स्थान को भरने के लिए उपयुक्त शब्द का चयन करें।

स्वतंत्रता दिवस पर देशभक्ति के गीत _____।

- Ans 1. गूँजे
2. नाचे
3. सजे
4. बोले

Question ID : 9895805902
Chosen Option : --

Q.1
9 दिये गये वाक्यांश के लिए एक शब्द दीजिये।

जो उपकार को न मानता हो

- Ans 1. कृतघ्न
2. कर्मठ
3. कर्मज
4. कृतज्ञ

Question ID : 9895805917
Chosen Option : --

Q.2
0 सही वर्तनी वाले शब्द का चयन करें।

- Ans 1.

- ✓ 2. रसोइया
- 3. रसोईया
- 4. रसौईया

Question ID : 9895805919
Chosen Option : --

Q.2
1 दिए गए वाक्य का वह भाग ज्ञात करें जिसमें कोई त्रुटि है।

जिम्मेदार नागरिक होने के नाते मालिक को नौकर के बच्चे के पढ़ाना चाहिए।

Ans

- 1. होने के नाते
- 2. बच्चे के पढ़ाना चाहिए।
- 3. मालिक को नौकर के
- 4. जिम्मेदार नागरिक

Question ID : 9895805894
Chosen Option : --

Q.2
2 दिए गए वाक्य का वह भाग ज्ञात करें जिसमें कोई त्रुटि है।

सभ्यता के विकास के साथ ही चिंताजनक अवस्था उत्पन्न होता जा रही है।

Ans

- 1. चिंताजनक अवस्था
- 2. के साथ ही
- 3. सभ्यता के विकास
- 4. उत्पन्न होता जा रही है।

Question ID : 9895805896
Chosen Option : --

Q.2
3 दिये गये वाक्यांश के लिए एक शब्द दीजिये।

जो अच्छे कुल में उत्पन्न हुआ हो

Ans

- 1. तल्लीन
- 2. कुलीन
- 3. शालीन
- 4. मलीन

Question ID : 9895805916
Chosen Option : --

Q.2
4 सही वर्तनी वाले शब्द का चयन करें।

Ans

- 1.

2. रोहिणि
 3. रौहिणी
 4. रोहिणी

Question ID : 9895805918
Chosen Option : --

Q.2
5 रिक्त स्थान को भरने के लिए उपयुक्त शब्द का चयन करें।

मुझे तुम पर _____ नहीं है।

Ans

1. विश्वास
 2. प्रेम
 3. घृणा
 4. पूजा

Question ID : 9895805903
Chosen Option : --