

Constable (GD) in CAPFs, NIA, SSF and Rifleman (GD) in Assam Rifles Examination, 2018

Roll No. :	
Registration No.	
Name :	
Exam Venue :	iON Digital Zone iDZ Baraipali
Exam Time :	12:30 PM - 2:00 PM
Exam Date :	22/02/2019

Section : General Section

Q.1 Identify the odd pair from the following.

- Ans
1. Taj Mahal : Agra
 - ✓ 2. Konark : Odisha
 - ✗ 3. Victoria memorial : Kolkata
 - ✗ 4. India Gate : New Delhi

Question ID : 9895806484

Chosen Option : 3

Q.2

The statements below are followed by two conclusions labeled I and II. Assuming that the information in the statements is true, even if it appears at variance with generally established facts, decide which conclusion(s) logically and definitely follow(s) from the information given in the statements.

Statements:

Some monkeys are donkeys.
All donkeys are lions.

Conclusion:

I. All lions are donkeys.

- Ans
- ✗ 1. Both conclusions follow.
 2. Only conclusion II follows.
 3. Only conclusion I follows.
 - ✓ 4. Neither conclusion I nor conclusion II follows.


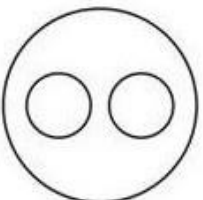
Question ID : 9895806493

Chosen Option : 3

Q.3

वेन आरेख का चयन करें जो दिए गए तीन वर्गों के बीच के संबंध को सर्वोत्तम रूप में दर्शाता है।

Ans भाषाएँ, हिन्दी, मलयालम

- ✗ 1. 
- ✓ 2. 



Question ID : 9895806505

Chosen Option : 1

Q.4 'Horse' is related to 'Foal' in the same way as 'Man' is related to '_____'.
Ans

1. Family

2. Student

3. Child

4. Women

Question ID : 9895806486

Chosen Option : 1

Q.5 Select the term that will come next in the following series.

aCCe, fHHj, kMMo, _____.

Ans 1. qRRt

2. qSSt

3. pRRt

4. pQQr

Question ID : 9895806481

Chosen Option : 3

Q.6 Identify the odd one from the following.

Ans 1. U

2. I

3. Z

4. E

Question ID : 9895806483

Chosen Option : 1

Q.7 दिए गए समीकरण को सही बनाने के लिए किन दो चिन्हों को आपस में बदलना होगा?

$$0 \div 15 + 15 - 10 \times 10 = -99$$

Ans 1. + और ×

2. + और ÷

3. ÷ और -

4. ÷ और ×

Question ID : 9895806498

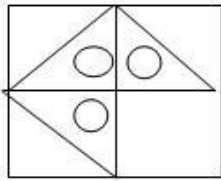
Q.8 Identify the decimal number that will come next in the following series.

20, 19.9, 19.89, 19.889, 19.8889, _____.

- Ans
- 1. 19.88889
 - 2. 19.88888
 - 3. 19.98889
 - 4. 19.88999

Question ID : 9895806494
Chosen Option : 1

Q.9 Select the correct option to complete the following pattern.



- Ans
- 1.
 - 2.
 - 3.
 - 4.

Question ID : 9895806502
Chosen Option : 4

Q.1 निम्नलिखित में से असंगत को पहचानें।

- Ans
- 1. भेड़
 - 2. रजाई
 - 3. तकिया
 - 4. बिस्तर

Question ID : 9895806482
Chosen Option : 1

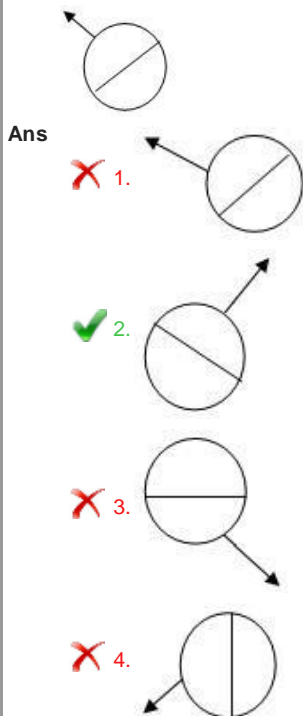
Q.1 If OFFICE is coded as PHIMHK, then COLLEGE will be coded as _____.

- Ans
- 1. DQOOJML
 - 2. DQOPJNL
 - 3. DQPPJML
 - 4. DQOPJML

Q.1 $\frac{10}{13} : 269 :: \frac{12}{16} : \text{_____}$
2 उस विकल्प का चयन करें जो तीसरे पद से उसी तरह से संबंधित है जिस प्रकार दूसरा पद पहले पद से संबंधित है।

- Ans
- 1. 400
 - 2. 326
 - 3. 256
 - 4. 350

Q.1 Select the option that most closely resembles the mirror image of the given figure.
3



Q.1 Read the given statements and conclusions carefully and decide which of the conclusions logically follow(s) from the statements.
4

Statements:

All girls are students.
All students are sisters.

Conclusions:

- I. All girls are sisters.
- II. Some girls are not sisters.

- Ans
- 1. Neither conclusion I nor conclusion II follows.
 - 2. Both conclusions I and II follow.
 - 3. Only conclusion II follows.
 - 4. Only conclusion I follows.

Q.1
5 If PROFIT is coded as 17-19-16-7-10-21, then how will COMPANY be coded as?

- Ans
- 1. 3-16-14-17-2-15-25
 - 2. 4-16-14-17-2-15-26
 - 3. 3-15-13-16-1-14-25
 - 4. 4-15-13-17-2-15-26

Question ID : 9895806487
Chosen Option : 2

Q.1
6 Sarath, Naveen, Deepak and Vikram are sitting around a round table and discussing their trades. Sarath sits opposite to the engineer. Naveen sits to the right of the doctor. The lawyer is to the left of the police. Vikram sits opposite to Deepak.

Who is the engineer?

- Ans
- 1. Deepak
 - 2. Sarath
 - 3. Vikram
 - 4. Naveen

Question ID : 9895806490
Chosen Option : 1

Q.1
7 A pharmaceutical company launches eight new medicines — A, B, C, D, E, F, G and H. The medicines were launched one after the other over a period of 3 months in 2015. The order in which the medicines were launched followed the given conditions:

A got launched immediately after H;
E got launched before both G and A;
C got launched immediately after E;
D got launched before E but after B; and
B got launched immediately before F.

Which of the following could be true?

- Ans
- 1. G was the second medicine to be launched.
 - 2. B was the third medicine to be launched.
 - 3. A was the fourth medicine to be launched.
 - 4. C was the fifth medicine to be launched.

Question ID : 9895806491
Chosen Option : 1

Q.1
8 Five friends are sitting in a row. Sathya is sitting next to Prabha but not to Dhivya. Keerthi is sitting next to Roja who is sitting on the extreme left and Dhivya is not sitting next to Keerthi. Who is sitting in the middle?

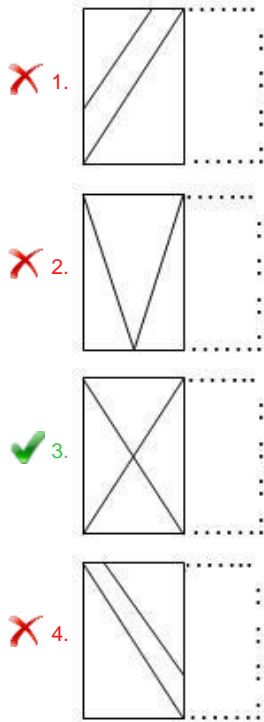
- Ans
- 1. Keerthi
 - 2. Sathya
 - 3. Dhivya
 - 4. Prabha

Question ID : 9895806489
Chosen Option : 1

Q.1
9 A square transparent sheet with a pattern is given. Select from among the four alternatives how the pattern would appear when the transparent sheet is folded at the dotted line.

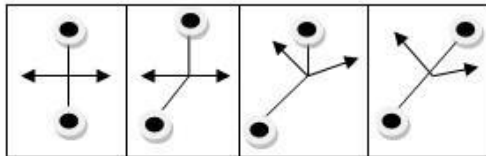


Ans

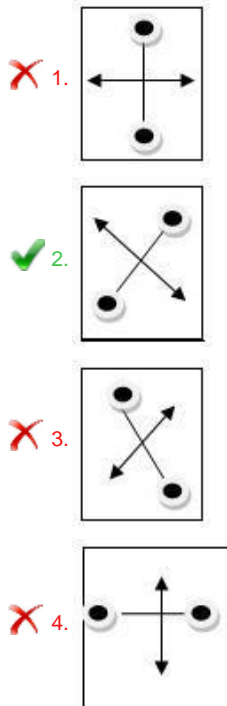


Question ID : 9895806504
Chosen Option : 4

Q.2
0 Select the figure that will come next in the following series.



Ans



Question ID : 9895806500
Chosen Option : 2

Identify the number that DOES NOT belong to the following series.

0, 7, 26, 2, 9, 27, 4, 11, 30

- Ans
- 1. 7
 - 2. 26
 - 3. 9
 - 4. 27

Question ID : 9895806495
Chosen Option : 1

Q.2 In the following number series, two numbers have been put within brackets. Study the series carefully and select the correct alternative with respect to the series.

2, 5, 10, 17, (26), 37, 50, 65, (81), 101

- Ans
- 1. Both the bracketed numbers are correct.
 - 2. Both the bracketed numbers are incorrect.
 - 3.

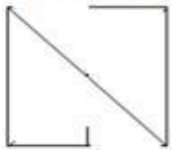
The first bracketed number (from the left) is incorrect and the second is correct.

4.

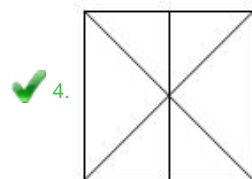
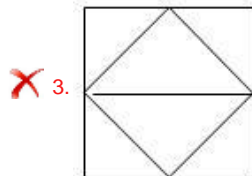
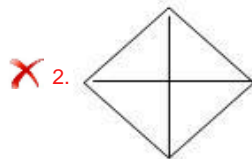
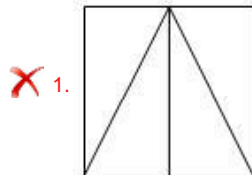
The first bracketed number (from the left) is correct and the second is incorrect.

Question ID : 9895806499
Chosen Option : 4

Q.2 Select the option in which the given figure is embedded.



Ans



Question ID : 9895806501
Chosen Option : 4

Q.2
4 Identify the odd number from the following.

- Ans 1. 167
 2. 256
 3. 196
 4. 225

Question ID : 9895806497
Chosen Option : 1

Q.2
5 Select the option that is related to the third term in the same way as the second term is related to the first term.

Abundant : Scarce :: Arrival : ?

- Ans 1. Departure
 2. Stop
 3. Reach
 4. Come

Question ID : 9895806485
Chosen Option : 1

Q.2
6 From when did GST come into effect in India?

- Ans 1. 2nd October 2015
 2. 15th August 2014
 3. 8th November 2016
 4. 1st July 2017

Question ID : 9895806539
Chosen Option : 1

Q.2
7 When was the Fugitive Economic Offenders Act passed by the Indian parliament?

- Ans 1. 2016
 2. 2012
 3. 2018
 4. 2014

Question ID : 9895806543
Chosen Option : 4

Q.2
8 The Minimum Support Price (MSP) is announced by the Government of India for how many crops?

- Ans 1. 20
 2. 30
 3. 25
 4. 15

Question ID : 9895806541
Chosen Option : 3

Q.2
9 In which city was the Indian National Congress founded?

Ans

- 1. Bombay
- 2. Madras
- 3. Rajkot
- 4. Calcutta

Question ID : 9895806555
Chosen Option : 2

Q.3 Identify the industrialist who is the founder of the natural resources company called Vedanta Resources.

0

Ans

- 1. Shankar Uday
- 2. Anil Agarwal
- 3. Vishal Sikka
- 4. Kuldeep Agarwal

Question ID : 9895806538
Chosen Option : 4

Q.3 In which country is the 'Great man made river' located?

1

Ans

- 1. Ethiopia
- 2. Libya
- 3. Egypt
- 4. Kenya

Question ID : 9895806550
Chosen Option : 4

Q.3 Who patented the FM radio?

2

Ans

- 1. Edwin H. Armstrong
- 2. John Logie Baird
- 3. Thomas Alva Edison
- 4. Nicola Tesla

Question ID : 9895806545
Chosen Option : 4

Q.3 The first ever Philip Kotler Presidential Award went to which of the following world leaders?

3

Ans

- 1. Narendra Modi
- 2. Donald Trump
- 3. Teresa May
- 4. Angela Merkel

Question ID : 9895806536
Chosen Option : 4

Q.3 Into how many 'mandalas' or books is the Rig Veda divided?

4

Ans

- 1.

- 2.
- 3. 5
- 4. 10

Question ID : 9895806553
Chosen Option : 2

Q.3
5 'Insuknawr', a traditional Indian sport, is associated with which state?

- Ans
- 1. Nagaland
 - 2. Meghalaya
 - 3. Mizoram
 - 4. Manipur

Question ID : 9895806534
Chosen Option : 4

Q.3
6 Prohibition of children under 14 years of age to work in any hazardous employment is stated in which article of the Indian constitution?

- Ans
- 1. 22
 - 2. 25
 - 3. 24
 - 4. 23

Question ID : 9895806542
Chosen Option : 4

Q.3
7 Which of the following is the national sport of Sri Lanka?

- Ans
- 1. Cricket
 - 2. Volleyball
 - 3. Hockey
 - 4. Basketball

Question ID : 9895806535
Chosen Option : 4

Q.3
8 रेगिस्तानी क्षेत्र में किस प्रकार की वनस्पति सामान्य रूप से पाई जाती है?

- Ans
- 1. झाड़ी
 - 2. हर्बेशीयस
 - 3. बेलें
 - 4. वृक्ष

Question ID : 9895806548
Chosen Option : 1

Q.3
9 Where is the largest drinking water reservoir in the world located?

- Ans
- 1.
 - 2. China

- 3. Russia
- 4. Saudi Arabia

Question ID : 9895806549
Chosen Option : 4

Q.4
0 'Modse' is a traditional dance form of which of the following Indian states?

- Ans
- 1. Jharkhand
 - 2. Nagaland
 - 3. Mizoram
 - 4. Odisha

Question ID : 9895806531
Chosen Option : 3

Q.4
1 How long should a person should have practised in a High Court to be appointed as a Judge of the Supreme Court of India?

- Ans
- 1. 10
 - 2. 15
 - 3. 5
 - 4. 12

Question ID : 9895806544
Chosen Option : 1

Q.4
2 In banking terminology, the term SLR stands for:

- Ans
- 1. Subsidiary Leveraging Ratio
 - 2. Standard Liquid Ratio
 - 3. Statutory Liquidity Ratio
 - 4. Subordinate Level Return

Question ID : 9895806540
Chosen Option : 1

Q.4
3 Green Revolution was first started by which of the following nations?

- Ans
- 1. Chile
 - 2. Mexico
 - 3. Brazil
 - 4. Argentina

Question ID : 9895806552
Chosen Option : 4

Q.4
4 In which Indian state is Mount Dhupgarh located?

- Ans
- 1. Gujarat
 - 2. Uttar Pradesh
 - 3. Madhya Pradesh
 - 4. Rajasthan

Question ID : 9895806551
Chosen Option : 1

Q.4
5 'Gulzar Houz', a historical fountain, is located in which of the following Indian cities?

- Ans
1. Hyderabad
 2. Lucknow
 3. Delhi
 4. Ajmer

Question ID : 9895806533
Chosen Option : 4

Q.4
6 'Losoong' is a festival of which of the following Indian states?

- Ans
1. Goa
 2. Sikkim
 3. Meghalaya
 4. Arunachal Pradesh

Question ID : 9895806532
Chosen Option : 4

Q.4
7 Which of the following was the capital of the Pallava Dynasty?

- Ans
1. Madurai
 2. Vishakhapatnam
 3. Thanjavur
 4. Kanchipuram

Question ID : 9895806554
Chosen Option : 4

Q.4
8 Which acid is present in tomato?

- Ans
1. Oxalic acid
 2. Tartaric acid
 3. Sulfenic acid
 4. Malic acid

Question ID : 9895806546
Chosen Option : 4

Q.4
9 Who is the author of the book 'Why I am a Hindu'?

- Ans
1. Amish Tripathi
 2. Durjoy Dutta
 3. Shashi Tharoor
 4. Chetan Bhagat

Question ID : 9895806537
Chosen Option : 4

Q.5
0 Which of the following animals is a mammal?

- Ans
- 1. Whale
 - 2. Tortoise
 - 3. Annelids
 - 4. Bullfrogs

Question ID : 9895806547
Chosen Option : 3

Q.5
1 कितने प्रतिशत प्रति वर्ष की साधारण ब्याज दर पर ₹1800 की राशि 10 वर्षों में ₹2700 हो जाएगी?

- Ans
- 1. 12%
 - 2. 15%
 - 3. 10%
 - 4. 5%

Question ID : 9895806595
Chosen Option : 4

Q.5
2 एक बल्लेबाज अपनी 12 वीं पारी में 60 रन बनाता है और इस तरह उसका औसत रन 2 रन से बढ़ जाता है। उसकी 11 वीं पारी के बाद का औसत रन क्या था?

- Ans
- 1. 36
 - 2. 84
 - 3. 63
 - 4. 48

Question ID : 9895806585
Chosen Option : 1

Q.5
3 A person travels from one place (P) to another place (Q) at a speed of 60 km/hr and return from Q by increasing his speed of 50%. The average speed of person is:

- Ans
- 1. 62 km/hr
 - 2. 75 km/hr
 - 3. 74 km/hr
 - 4. 72 km/hr

Question ID : 9895806589
Chosen Option : 2

Q.5
4 The base of a right prism is an equilateral triangle with a side of 5m, and its height is 20m. The volume of the prism is:

- Ans
- 1. 125 m^3
 - 2. $120\sqrt{3} \text{ m}^3$
 - 3. 120 m^3
 - 4. $125\sqrt{3} \text{ m}^3$

Question ID : 9895806602
Chosen Option : 4

Q.5

5 The value of $54 - 2(20 + 12 \div 4 \times 3 - 2 \times 2) + 10$ is equal to:

- Ans
- 1. 12
 - 2. 24
 - 3. 14
 - 4. 4

Question ID : 9895806582
Chosen Option : 3

Q.5
6 The least number when divided by 27, 45, 30 leaves the remainder 5 in each case is:

- Ans
- 1. 308
 - 2. 102
 - 3. 260
 - 4. 275

Question ID : 9895806581
Chosen Option : 2

Q.5
7 Study the Table Properly and answer by interpreting the data:

The table gives the percentage of marks obtained by five students in four different subjects in an examination.

Subjects (Max. Marks)				
students	Maths (150)	Chemistry (130)	Physics (120)	Biology (100)
Harish	90	50	60	70
Raman	80	30	60	65
Rajesh	70	60	80	82
Manoj	35	75	20	72
Azmat	40	35	38	48

The number of students who obtained 50% and above marks in all subject is:

- Ans
- 1. 2
 - 2. 3
 - 3. 5
 - 4. 4

Question ID : 9895806604
Chosen Option : 1

Q.5
8 Study the Table Properly and answer by interpreting the data

The table gives the percentage of marks obtained by five students in four different subjects in an examination.

Subjects (Max. Marks)				
students	Maths (150)	Chemistry (130)	Physics (120)	Biology (100)
Harish	90	50	60	70
Raman	80	30	60	65
Rajesh	70	60	80	82
Manoj	35	75	20	72
Azmat	40	35	38	48

What is the average marks obtained by all five students in Chemistry?

- Ans
- 1. 70
 - 2. 65
 - 3. 85
 - 4. 75

Question ID : 9895806603
Chosen Option : 2

Q.5 The ratio of two numbers is 8 : 3 and their difference is 120. The smallest of the two number is:

- Ans
- 1. 162
 - 2. 65
 - 3. 84
 - 4. 72

Question ID : 9895806592
Chosen Option : 4

Q.6 The value of $5 + [(28 - 4) \div 2^2 + 2)] - 2$ is equal to:

- Ans
- 1. 5
 - 2. 7
 - 3. 6
 - 4. 4

Question ID : 9895806583
Chosen Option : 2

Q.6 A shirt is marked ₹2500 is available for ₹2200. The rate of discount percentage offered as:

- Ans
- 1. 10%
 - 2. 25%
 - 3. 12%
 - 4. 15%

Question ID : 9895806599
Chosen Option : 3

Q.6 If 20% of certain number is equal to $\frac{3}{4}$ th of another number, what is the ratio between the numbers?

- Ans
- 1. 4 : 3
 - 2. 4 : 6
 - 3. 15 : 4
 - 4. 3 : 4

Question ID : 9895806594
Chosen Option : 4

Q.6 The time taken to cover a distance 150 km by a train moving at 40 km/h is:

- Ans
- 1. 3 hrs 45 minutes
 - 2. 3 hrs 35 minutes
 - 3. 2 hrs 35 minutes
 - 4. 2 hrs 45 minutes

Question ID : 9895806588
Chosen Option : 1

Q.6 वार्षिक आधार पर चक्रवृद्धित 5% प्रति वर्ष की ब्याज दर पर ₹800 की राशि कितने समय में ₹882 हो जाएगी?

- Ans
- 1.

- 2. 5 वर्ष
- 3. 2 वर्ष
- 4. 3 वर्ष

Question ID : 9895806596
Chosen Option : 3

Q.6
5 The relationship between mean, median and mode in the central tendency is:

- Ans
- 1. Mode = 3 median + 2 mean
 - 2. Mode = 3 median - 2 mean
 - 3. Median = 3 mode - 2 mean
 - 4. Median = 3 mode + 2 mean

Question ID : 9895806590
Chosen Option : 1

Q.6
6 Study the Table Properly and answer by interpreting the data

The table gives the percentage of marks obtained by five students in four different subjects in an examination.

students	Subjects (Max. Marks)			
	Maths (150)	Chemistry (130)	Physics (120)	Biology (100)
Harish	90	50	60	70
Raman	80	30	60	65
Rajesh	70	60	80	82
Manoj	35	75	20	72
Azmat	40	35	38	48

How many students secured below 50% marks in each of the subject is:

- Ans
- 1. 1
 - 2. 2
 - 3. 3
 - 4. 4

Question ID : 9895806605
Chosen Option : 1

Q.6
7 The cost price of 15 articles is equal to the selling price of 12 articles. The Profit or Loss percent of the article is:

- Ans
- 1. 20% profit
 - 2. 25% loss
 - 3. 25% profit
 - 4. 20% loss

Question ID : 9895806597
Chosen Option : 1

Q.6
8 The ratio between the selling price and cost price of an article is 7 : 3, What will be the ratio between the profit and selling price of the article?

- Ans
- 1. 7 : 4
 - 2. 5 : 2
 - 3. 7 : 3
 - 4. 4 : 7

Question ID : 9895806593

Q.6
9 Rahim and Harish can do a work in 15 days and 10 days respectively. In how many days the same work will be finished if they work together?

- Ans 1. 6
 2. 30
 3. 25
 4. 5

Question ID : 9895806586
Chosen Option : 1

Q.7
0 पांच संख्याओं का औसत 120 है। यदि एक संख्या को अलग किया जाए, तो शेष चार संख्याओं का औसत 130 है। अलग की गई संख्या है:

- Ans 1. 80
 2. 110
 3. 75
 4. 120

Question ID : 9895806584
Chosen Option : 1

Q.7
1 ARITHMETIC शब्द में, I अक्षर के होने का प्रतिशत क्या है?

- Ans 1. 10%
 2. 20%
 3. 15%
 4. 25%

Question ID : 9895806591
Chosen Option : 2

Q.7
2 How many cubes of 5 cm edge can be placed in a cubic box of 2m edge?

- Ans 1. 64000
 2. 10000
 3. 5000
 4. 46000

Question ID : 9895806600
Chosen Option : 3

Q.7
3 If 6 persons reap 36 acres in 24 days, how many acres will 12 persons reap in 18 days?

- Ans 1. 15
 2. 28
 3. 24
 4. 35

Question ID : 9895806587
Chosen Option : 3

- Ans 1. 30% loss
 2. 20% loss
 3. 25% profit
 4. 15 % profit

Question ID : 9895806598
Chosen Option : 3

Q.7 The area of two equilateral triangles is 36 : 64. The altitudes of the triangles will be in the ratio of:
5

- Ans 1. 8 : 6
 2. 36 : 64
 3. 64 : 36
 4. 6 : 8

Question ID : 9895806601
Chosen Option : 4

Section : English Language

Q.1 From the given options, identify the segment in the sentence which contains the grammatical error.

Gazing out of the train window as I travelled upon the country, I was introduced to a new India.

- Ans 1. a new India
 2. introduced to
 3. upon the
 4. Gazing out

Question ID : 9895806154
Chosen Option : 2

Q.2 Select the most appropriate option to fill in the blank.

There is nothing that _____ of us can do to solve the problem.

- Ans 1. every one
 2. any
 3. none
 4. no one

Question ID : 9895806160
Chosen Option : 2

Q.3 Select the correctly spelt word.

- Ans 1. Permision
 2. Parmission
 3. Permmission
 4. Permission

Question ID : 9895806179
Chosen Option : 4

Comprehension:

In the following passage some words have been deleted. Fill in the blanks with the help of the alternatives given.

Lions live for around 10-14 years in the wild, while in (1) _____ they can live over 20 years. In the wild, males seldom live longer than ten years as fights with rivals occasionally cause them (2) _____. They typically (3) _____ Savanna and grassland, although they may take to bush and forest. A (4) _____ of lions consists of related females and offspring and some adult males. Groups of female lions typically hunt together (5) _____ mostly on large hoofed animals.

SubQuestion No : 4

Q.4 Select the most appropriate option that will fill in the blank number 1.

- Ans
- 1. cage
 - 2. forest
 - 3. captivity
 - 4. caves

Question ID : 9895806163
Chosen Option : 4

Comprehension:

In the following passage some words have been deleted. Fill in the blanks with the help of the alternatives given.

Lions live for around 10-14 years in the wild, while in (1) _____ they can live over 20 years. In the wild, males seldom live longer than ten years as fights with rivals occasionally cause them (2) _____. They typically (3) _____ Savanna and grassland, although they may take to bush and forest. A (4) _____ of lions consists of related females and offspring and some adult males. Groups of female lions typically hunt together (5) _____ mostly on large hoofed animals.

SubQuestion No : 5

Q.5 Select the most appropriate option that will fill in the blank number 2.

- Ans
- 1. loss
 - 2. harm
 - 3. damage
 - 4. injuries

Question ID : 9895806164
Chosen Option : 1

Comprehension:

In the following passage some words have been deleted. Fill in the blanks with the help of the alternatives given.

Lions live for around 10-14 years in the wild, while in (1) _____ they can live over 20 years. In the wild, males seldom live longer than ten years as fights with rivals occasionally cause them (2) _____. They typically (3) _____ Savanna and grassland, although they may take to bush and forest. A (4) _____ of lions consists of related females and offspring and some adult males. Groups of female lions typically hunt together (5) _____ mostly on large hoofed animals.

SubQuestion No : 6

Q.6 Select the most appropriate option that will fill in the blank number 3.

- Ans
- 1. grow
 - 2. nurture
 - 3. inhabit
 - 4. breed

Question ID : 9895806165
Chosen Option : 1

Comprehension:

In the following passage some words have been deleted. Fill in the blanks with the help of the alternatives given.

Lions live for around 10-14 years in the wild, while in (1) _____ they can live over 20 years. In the wild, males seldom live longer than ten years as fights with rivals occasionally cause them (2) _____. They typically (3) _____ Savanna and grassland, although they may take to bush and forest. A (4) _____ of lions consists of related females and offspring and some adult males. Groups of female lions typically hunt together (5) _____ mostly on large hoofed animals.

SubQuestion No : 7

Q.7 Select the most appropriate option that will fill in the blank number 4.

- Ans
- 1. flock
 - 2. pride
 - 3. bunch
 - 4. pack

Question ID : 9895806166
Chosen Option : 2

Comprehension:

In the following passage some words have been deleted. Fill in the blanks with the help of the alternatives given.

Lions live for around 10-14 years in the wild, while in (1) _____ they can live over 20 years. In the wild, males seldom live longer than ten years as fights with rivals occasionally cause them (2) _____. They typically (3) _____ Savanna and grassland, although they may take to bush and forest. A (4) _____ of lions consists of related females and offspring and some adult males. Groups of female lions typically hunt together (5) _____ mostly on large hoofed animals.

SubQuestion No : 8

Q.8 Select the most appropriate option that will fill in the blank number 5.

- Ans
1. preying
 2. snatching
 3. consuming
 4. eating

Question ID : 9895806167

Chosen Option : 4

Q.9 Select the antonym of the given word.

PAUCITY

- Ans
1. Surplus
 2. Lack
 3. Flexibility
 4. Shortage

Question ID : 9895806171

Chosen Option : 3

Q.1
0 Select the option that means the same as the given idiom.

To be in hot water

- Ans
1. To be depended on
 2. To be unreliable
 3. To be praised
 4. To be in trouble

Question ID : 9895806172

Chosen Option : 3

Q.1
1 From the given options, identify the segment in the sentence which contains the grammatical error.

The football team had won the series abroad after a decade and brings home the trophy.

- Ans
1. won the series
 2. a decade
 3. abroad after

✓ 4. and brings

Question ID : 9895806156
Chosen Option : 2

Q.1
2 Select the most appropriate synonym of the given word.

FUTILE

- Ans
1. Boring
 - ✓ 2. Useless
 3. Uninteresting
 4. Juicy

Question ID : 9895806168
Chosen Option : 4

Q.1
3 Select the most appropriate option to substitute the underlined segment in the given sentence. If there is no need to substitute it, select No improvement.

Evolution is the gradual change over the physical and mental make up of species.

- Ans
1. on the physical and mental make-up of species
 2. from the physical and mental make-up of species
 3. No improvement
 4. in the physical and mental make-up of species

Question ID : 9895806159
Chosen Option : 1

Q.1
4 Select the most appropriate option to fill in the blank.

In my opinion, he is the _____ of all the brothers.

- Ans
1. brightly
 2. brightest
 3. bright
 4. brighter

Question ID : 9895806161
Chosen Option : 2

Q.1
5 Select the antonym of the given word.

GORGEOUS

- Ans
- ✗ 1. Decorative
 - ✗ 2. Beautiful
 - ✗ 3. Smart
 4. Ordinary

Question ID : 9895806170
Chosen Option : 4

Q.1
6 Select the most appropriate option to substitute the underlined segment in the given sentence. If there is no need to substitute it, select No improvement.

He searched for his files across the chest of drawers.

- Ans
1. No improvement
 2. above the chest of drawers
 3. in the chest of drawers
 4. into the chest of drawers

Question ID : 9895806157
Chosen Option : 2

Q.1
7 Select the most appropriate option to substitute the underlined segment in the given sentence. If there is no need to substitute it, select No improvement.

He do not register his dissent to the proposal put forward by the member.

- Ans
1. No improvement
 2. did not registered his dissent to
 3. does not registered his dissent to
 4. did not register his dissent to

Question ID : 9895806158
Chosen Option : 4

Q.1
8 Select the word which means the same as the group of words given.

A collection of poems

- Ans
1. Rhyme
 2. Verse
 3. Stanza
 4. Anthology

Question ID : 9895806174
Chosen Option : 2

Q.1
9 Select the option that means the same as the given idiom.

Fair weather friends

- Ans
1. Friends who are always happy
 2. Friends who keep you happy
 3. Friends in good times
 4. Good company for holidays

Question ID : 9895806173
Chosen Option : 3

Q.2
0 Select the most appropriate word to fill in the blank.

I read 'Harry Potter' books because they were _____ by my friend.

- Ans
1. counselled
 2. advised

- 3. recommended
- 4. motivated

Question ID : 9895806176
Chosen Option : 4

Q.2
1 Select the most appropriate word to fill in the blank.

In what ways has progress in human knowledge _____ our environment?

- Ans
- 1. aligned
 - 2. represented
 - 3. altered
 - 4. reframed

Question ID : 9895806177
Chosen Option : 2

Q.2
2 From the given options, identify the segment in the sentence which contains the grammatical error.

The department will initiate a campaign to promoting organic farming across the State.

- Ans
- 1. across the State
 - 2. organic farming
 - 3. will initiate
 - 4. to promoting

Question ID : 9895806155
Chosen Option : 2

Q.2
3 Select the correctly spelt word.

- Ans
- 1. Comamorate
 - 2. Comemorate
 - 3. Commamorate
 - 4. Commemorate

Question ID : 9895806178
Chosen Option : 3

Q.2
4 Select the most appropriate synonym of the given word.

MANDATORY

- Ans
- 1. Elementary
 - 2. Lucid
 - 3. Advanced
 - 4. Compulsory

Question ID : 9895806169
Chosen Option : 4

Q.2
5

Select the word which means the same as the group of words given.

Country treated as permanent home by an individual

- Ans
- 1. Residence
 - 2. Domicile
 - 3. Dwelling
 - 4. Neighbourhood

Question ID : 9895806175
Chosen Option : 1

Section : Hindi Language

Q.1 दिए गए वाक्य में रेखांकित खंड को प्रतिस्थापित करने के लिए उपयुक्त विकल्प का चयन करें।

अक्षरों से बनी लिपियों की महत्त्व है।

- Ans
- 1. लिपियों के महत्त्व है।
 - 2. लिपियों को महत्त्व है।
 - 3. लिपियों का महत्त्व है।
 - 4. लिपियों ने महत्त्व है।

Question ID : 9895805950
Chosen Option : --

Q.2 सही वर्तनी वाले शब्द का चयन करें।

- Ans
- 1. पत्रकार
 - 2. पत्राकर
 - 3. पत्रकर
 - 4. पत्ररकार

Question ID : 9895805970
Chosen Option : --

Q.3 सही वर्तनी वाले शब्द का चयन करें।

- Ans
- 1. रूपावन
 - 2. रूपबान
 - 3. रूपवान
 - 4. रूपवान

Question ID : 9895805971
Chosen Option : --

Q.4 दिये गये वाक्यांश के लिए एक शब्द चुनिए।

सदा रहने वाला

- Ans
- 1. शाश्वत
 - 2. संविदा

- ✓ 3. सदाचारी
4. सदाशील

Question ID : 9895805968
Chosen Option : --

Q.5 दिए गए शब्द का विलोम चुनें।

सर्वदा

- Ans ✗ 1. यदा-कदा
✗ 2. सब तरफ
3. सरिता
✓ 4. सदा

Question ID : 9895805962
Chosen Option : --

Q.6 दिए गए वाक्य का वह भाग ज्ञात करें जिसमें कोई त्रुटि है।

वनों की अंधाधुंध कटाई से स्वच्छ वायु मिलनी कठिन हो गया है।

- Ans 1. कटाई से
2. वनों की अंधाधुंध
3. स्वच्छ वायु
4. मिलनी कठिन हो गया है।

Question ID : 9895805948
Chosen Option : --

Q.7 दिए गए शब्द के पर्यायवाची शब्द का चयन करें।

किनारा

- Ans 1. गंगा
✗ 2. तट
3. नदी
4. संगम

Question ID : 9895805965
Chosen Option : --

Q.8 दिए गए वाक्य में रेखांकित खंड को प्रतिस्थापित करने के लिए उपयुक्त विकल्प का चयन करें।

दादाजी समाचार पत्र पढ़ रहे हैं और दादी जी पूजा कर रहे हैं।

- Ans ✗ 1. दादी जी पूजा कर रहे हैं।
✗ 2. दादी जी पूजा कर रहा है।

- ✓ 3. दादी जी पूजा कर रही हैं।
4. दादी जी पूजा कर रही थे।

Question ID : 9895805949
Chosen Option : --

Q.9 रिक्त स्थान को भरने के लिए उपयुक्त शब्द का चयन करें।

हम घूमने _____।

- Ans
1. चाहेंगे
 2. जाएँगे
 3. गाएँगे
 4. देखेंगे

Question ID : 9895805953
Chosen Option : --

Comprehension:

निम्नलिखित गद्यांश के रिक्त स्थानों की पूर्ति गद्यांश के नीचे दिए गए प्रश्नों के अनुसार कीजिए -

आज के युवा कल के भविष्य हैं। देश की उन्नति का आधार युवा वर्ग को ही माना जाता है। युवाओं में इतना _____ (1) एवं शक्ति होती है कि वे किसी भी परेशानी का सामना कर सकते हैं। इनके जीने की अपनी एक अलग _____ (2) होती है। युवा वर्ग में हर समय कुछ नया करने का _____ (3) होता है। आज इन्हीं सब की देन है कि हमारी सेना दिन-प्रतिदिन _____ (4) होती जा रही है। परन्तु कई कारणों से युवाओं में पाश्चात्य संस्कृति का प्रभाव एवं आधुनिक रहन-सहन की धारणा उत्पन्न हो रही है, जिसके कारण वे अपने नैतिक _____ (5) की अवहेलना करने लगे हैं।

SubQuestion No : 10

Q.1
0 गद्यांश में संकेतित रिक्त स्थान (1) के लिए उपयुक्त शब्द होगा -

- Ans
- ✗ 1. पानी
 2. शांति
 - ✗ 3. साहस
 4. खुशी

Question ID : 9895805957
Chosen Option : --

Comprehension:

निम्नलिखित गद्यांश के रिक्त स्थानों की पूर्ति गद्यांश के नीचे दिए गए प्रश्नों के अनुसार कीजिए -

आज के युवा कल के भविष्य हैं। देश की उन्नति का आधार युवा वर्ग को ही माना जाता है। युवाओं में इतना _____ (1) एवं शक्ति होती है कि वे किसी भी परेशानी का सामना कर सकते हैं। इनके जीने की अपनी एक अलग _____ (2) होती है। युवा वर्ग में हर समय कुछ नया करने का _____ (3) होता है। आज इन्हीं सब की देन है कि हमारी सेना दिन-प्रतिदिन _____ (4) होती जा रही है। परन्तु कई कारणों से युवाओं में पाश्चात्य संस्कृति का प्रभाव एवं आधुनिक रहन-सहन की धारणा उत्पन्न हो रही है, जिसके कारण वे अपने नैतिक _____ (5) की अवहेलना करने लगे हैं।

SubQuestion No : 11

Q.1
1 गद्यांश में संकेतित रिक्त स्थान (2) के लिए उपयुक्त शब्द होगा -

- Ans
1. तरीका
 2. उत्साह
 3. शैली
 4. जिज्ञासा

Question ID : 9895805958
Chosen Option : --

Comprehension:

निम्नलिखित गद्यांश के रिक्त स्थानों की पूर्ति गद्यांश के नीचे दिए गए प्रश्नों के अनुसार कीजिए -

आज के युवा कल के भविष्य हैं। देश की उन्नति का आधार युवा वर्ग को ही माना जाता है। युवाओं में इतना _____ (1) एवं शक्ति होती है कि वे किसी भी परेशानी का सामना कर सकते हैं। इनके जीने की अपनी एक अलग _____ (2) होती है। युवा वर्ग में हर समय कुछ नया करने का _____ (3) होता है। आज इन्हीं सब की देन है कि हमारी सेना दिन-प्रतिदिन _____ (4) होती जा रही है। परन्तु कई कारणों से युवाओं में पाश्चात्य संस्कृति का प्रभाव एवं आधुनिक रहन-सहन की धारणा उत्पन्न हो रही है, जिसके कारण वे अपने नैतिक _____ (5) की अवहेलना करने लगे हैं।

SubQuestion No : 12

Q.1
2 गद्यांश में संकेतित रिक्त स्थान (3) के लिए उपयुक्त शब्द होगा -

- Ans
1. डर
 2. आदर

3. प्रेम
 4. सपना

Question ID : 9895805959
Chosen Option : --

Comprehension:

निम्नलिखित गद्यांश के रिक्त स्थानों की पूर्ति गद्यांश के नीचे दिए गए प्रश्नों के अनुसार कीजिए -

आज के युवा कल के भविष्य हैं। देश की उन्नति का आधार युवा वर्ग को ही माना जाता है। युवाओं में इतना _____ (1) एवं शक्ति होती है कि वे किसी भी परेशानी का सामना कर सकते हैं। इनके जीने की अपनी एक अलग _____ (2) होती है। युवा वर्ग में हर समय कुछ नया करने का _____ (3) होता है। आज इन्हीं सब की देन है कि हमारी सेना दिन-प्रतिदिन _____ (4) होती जा रही है। परन्तु कई कारणों से युवाओं में पाश्चात्य संस्कृति का प्रभाव एवं आधुनिक रहन-सहन की धारणा उत्पन्न हो रही है, जिसके कारण वे अपने नैतिक _____ (5) की अवहेलना करने लगे हैं।

SubQuestion No : 13

Q.1
3 गद्यांश में संकेतित रिक्त स्थान (4) के लिए उपयुक्त शब्द होगा -

- Ans 1. मजबूत
 2. मलिन
 3. दुर्बल
 4. कमजोर

Question ID : 9895805960
Chosen Option : --

Comprehension:

निम्नलिखित गद्यांश के रिक्त स्थानों की पूर्ति गद्यांश के नीचे दिए गए प्रश्नों के अनुसार कीजिए -

आज के युवा कल के भविष्य हैं। देश की उन्नति का आधार युवा वर्ग को ही माना जाता है। युवाओं में इतना _____ (1) एवं शक्ति होती है कि वे किसी भी परेशानी का सामना कर सकते हैं। इनके जीने की अपनी एक अलग _____ (2) होती है। युवा वर्ग में हर समय कुछ नया करने का _____ (3) होता है। आज इन्हीं सब की देन है कि हमारी सेना दिन-प्रतिदिन _____ (4) होती जा रही है। परन्तु कई कारणों से युवाओं में पाश्चात्य संस्कृति का प्रभाव एवं आधुनिक रहन-सहन की धारणा उत्पन्न हो रही है, जिसके कारण वे अपने नैतिक _____ (5) की अवहेलना करने लगे हैं।

SubQuestion No : 14

Q.1
4 गद्यांश में संकेतित रिक्त स्थान (5) के लिए उपयुक्त शब्द होगा -

- Ans
1. फिल्मों
 2. गानों
 3. मूल्यों
 4. कीमतों

Question ID : 9895805961
Chosen Option : --

Q.1
5 दिए गए शब्द के पर्यायवाची शब्द का चयन करें।

- पर्वत
- Ans
1. शैल
 2. पावन
 3. पवन
 4. भुजंग

Question ID : 9895805964
Chosen Option : --

Q.1
6 निम्नलिखित में से उस विकल्प का चयन करें जो 'पाँव जमीन पर न पड़ना' मुहावरे का अर्थ व्यक्त करता है।

- Ans
1. अत्यधिक खुश होना
 2. जमीन से ऊपर पाँव रखना
 3. आसमान में उड़ना
 4. कल्पना करना

Question ID : 9895805967
Chosen Option : --

Q.1
7 दिए गए शब्द का विलोम चुनें।

- योग
- Ans
1. नीरोग
 2. आसन
 3. संयोग
 4. वियोग

Question ID : 9895805963
Chosen Option : --

Q.1
8 दिये गये वाक्यांश के लिए एक शब्द चुनिए।

बहुत तीव्र चलने वाला

Ans

- ✓ 1. द्रुतगामी
- ✗ 2. अल्पगामी
- ✗ 3. आगामी
4. प्रतिगामी

Question ID : 9895805969
Chosen Option : --

Q.1
9 रिक्त स्थान को भरने के लिए उपयुक्त शब्द का चयन करें।

चिड़िया पेड़ _____ बैठी है।

Ans

1. भीतर
2. अंदर
- ✗ 3. पर
- ✗ 4. बाहर

Question ID : 9895805955
Chosen Option : --

Q.2
0 रिक्त स्थान को भरने के लिए उपयुक्त शब्द का चयन करें।

अच्छे बालक _____ करते हैं।

Ans

1. गलिगलौज
2. पढाई
3. लड़ाई
4. चोरी

Question ID : 9895805954
Chosen Option : --

Q.2
1 निम्नलिखित में से उस विकल्प का चयन करें जो 'पाँचों उँगलियों घी में होना' मुहावरे का अर्थ व्यक्त करता है।

Ans

1. हानि होना
2. सब प्रकार से लाभ ही लाभ
3. उँगलियाँ चाटना
4. उँगलियाँ घी में डालकर बैठना

Question ID : 9895805966
Chosen Option : --

Q.2
2 दिए गए वाक्य का वह भाग ज्ञात करें जिसमें कोई त्रुटि है।

सौरभ अपनी नाक का ऊपर मक्खी भी नहीं बैठने देता।

Ans

- ✗ 1. मक्खी भी
- ✗ 2. नहीं बैठने देता।

✗ 3. नाक का ऊपर

4. सौरभ अपनी

Question ID : 9895805947
Chosen Option : --

Q.2
3 दिए गए वाक्य में रेखांकित खंड को प्रतिस्थापित करने के लिए उपयुक्त विकल्प का चयन करें।

हम जैसे बीज बोते हैं ऐसे ही पेड़ और फल होते हैं।

Ans

1. जैसे ही पेड़ और फल
2. वैसे ही पेड़ और फल
3. वैसा ही पेड़ और फल
4. उतना ही पेड़ और फल

Question ID : 9895805951
Chosen Option : --

Q.2
4 रिक्त स्थान को भरने के लिए उपयुक्त शब्द का चयन करें।

वह आलमारी _____ की बनी है।

Ans

1. लोहे
2. मिट्टी
- ✗ 3. कपड़ा
4. रंग

Question ID : 9895805952
Chosen Option : --

Q.2
5 दिए गए वाक्य का वह भाग ज्ञात करें जिसमें कोई त्रुटि है।

विकास वाहक उपकरणों ने अनेक प्रकार का समस्याएँ उत्पन्न कर दी हैं।

Ans

1. विकास वाहक उपकरणों ने
2. उत्पन्न कर दी हैं।
3. अनेक प्रकार
4. का समस्याएँ

Question ID : 9895805946
Chosen Option : --

Constable (GD) in CAPFs, NIA, SSF and Rifleman (GD) in Assam Rifles Examination, 2018

Roll No. :	
Registration No.	
Name :	
Exam Venue :	Tara Online Web Controller
Exam Time :	4:00 PM - 5:30 PM
Exam Date :	22/02/2019

Section : General Section

Q.1 Identify the odd pair from the following.

- Ans 1. Tuberculosis : Heart
 2. Jaundice : Liver
 3. Rickets : Bones
 4. Night Blindness : Eyes

Question ID : 9895806509

Chosen Option : 2

Q.2

Read the given statements and conclusions carefully and decide which of the conclusions logically follow(s) from the statements.

Statements:

Some animals are birds.
Cow is an animal.

Conclusions:

I. Some birds are animals.

- Ans II 1. Neither conclusion I nor conclusion II follows.
 2. Both conclusions I and II follow.
 3. Only conclusion I follows.
 4. Only conclusion II follows.

Question ID : 9895806517

Chosen Option : 4

Q.3

Identify the option that belongs to the following group.

- Ans ~~Lamb~~ ~~Calf~~ ~~Tadpole~~
 1. Amphibians
 2. Puppy
 3. Wild animals
 4. Reptiles

Question ID : 9895806511

Chosen Option : 1

Q.4

Four persons (two men and two women) were sitting in a restaurant. They were each seated at the north, east, south and west of a table. No woman was facing the east. Persons sitting opposite to each other were not of the same gender. One man was facing the south. Which directions were the women facing?

- Ans 1. North and west
 2. South and west
 3. East and west
 4. North and south

Question ID : 9895806516
Chosen Option : 4

Q.5 If MARKET is coded as NCUOJZ, then RESPECT will be coded as _____.

- Ans 1. SGVTIJA
 2. SGVTIJZ
 3. SGVTJIZ
 4. SGVTJIA

Question ID : 9895806513
Chosen Option : 3

Q.6 A square transparent paper after folding looks like as shown in the figure by solid lines. How will it look when unfolded? (Rotation is not allowed)



- Ans 1.
- 2.
- 3.
- 4.

Question ID : 9895806529
Chosen Option : 3

Q.7 Identify the odd one from the following.

- Ans 1. Brother
 2. Sister
 3. Uncle
 4. Friend

Question ID : 9895806507
Chosen Option : 4

Q.8 Select the option that is related to the third number in the same way as the second number is related to the first number.

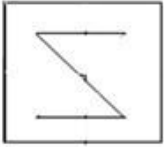
1 : 121 :: 5 : _____

- Ans 1.

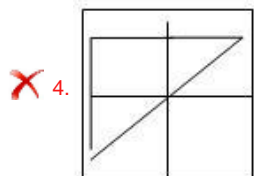
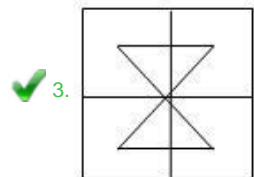
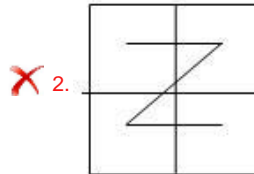
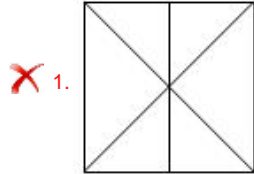
- 2. 25
- 3. 255
- 4. 125

Question ID : 9895806521
Chosen Option : 2

Q.9 Select the option in which the given figure is embedded.



Ans



Question ID : 9895806526
Chosen Option : 3

Q.1
0 Select the number that DOES NOT belong to the following group.

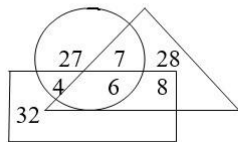
1, 1, 1.5, 3, 7.5, 22.5, 78.75, 310

- Ans
- 1. 22.5
 - 2. 310
 - 3. 78.75
 - 4. 1.5

Question ID : 9895806520
Chosen Option : 3

Q.1
1

In the given Venn diagram, the rectangle represents students, the triangle represents teachers and the circle represents players. Study the diagram carefully and answer the question that follows.
How many students are players but not teachers?



- Ans
- 1. 4
 - 2. 6
 - 3. 8
 - 4. 7

Question ID : 9895806530
Chosen Option : 1

Q.1 There is only one dictionary in a library which will be used by 6 students P, Q, R, S, T and U, one by one. S will use it immediately after Q and before P. T will use it immediately after R and before U. Q will use the dictionary after U. Who will use the dictionary in the end?

- Ans
- 1. S
 - 2. U
 - 3. Q
 - 4. P

Question ID : 9895806515
Chosen Option : 4

Q.1 Identify the number pair that is different from the rest.

- Ans
- 1. 45 - 5
 - 2. 18 - 2
 - 3. 72 - 9
 - 4. 90 - 10

Question ID : 9895806522
Chosen Option : 4

Q.1 Select the option that most closely resembles the mirror image of the given word.

TWIN

- Ans
- 1. IIIWT
 - 2. NIMT
 - 3. NIWT
 - 4. TWIN

Question ID : 9895806528
Chosen Option : 3

Q.1 If D = 3, G = 6, and OWL = 47, then FLOWER = _____.

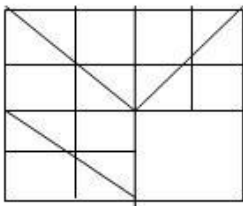
- Ans
- 1. 89
 - 2. 71
 - 3. 73
 - 4. 82

Q.1
6 Identify the number that will come in the following series.

2500, 2400, 2200, 1900, 1500, _____

- Ans
- 1. 1000
 - 2. 900
 - 3. 1110
 - 4. 1100

Q.1
7 Select the correct option to complete the following pattern.



- Ans
- 1.
 - 2.
 - 3.
 - 4.

Q.1
8 Select the term that will come next in the following series.

Z2A, X4D, V6G, T8J, R10M, _____.

- Ans
- 1. Q12Q
 - 2. Q12P
 - 3. P12Q
 - 4. P12P

Q.1
9 Select the option that is analogous to the given pair.

Nation : President

- Ans
- 1.

- 2. State : Chief Minister
- 3. State : Governor
- 4. State : Chief Secretary

Question ID : 9895806510
Chosen Option : 3

Q.2
0 Which two signs need to be interchanged to make the given equation correct?

$$5 \times 5 + 5 - 5 \div 5 = 5$$

- Ans 1. \times and $-$
2. $+$ and \times
3. $+$ and $-$
4. \div and $-$

Question ID : 9895806523
Chosen Option : 3

Q.2
1 Six friends P, Q, R, S, T and U are watching a cricket match sitting in a stadium. P is sitting at one extreme end. T is sitting between P and U. R is sitting to the immediate left of U and immediate right of Q. Who is sitting at the extreme right end?

- Ans 1. S
2. Q
3. P
4. R

Question ID : 9895806514
Chosen Option : 3

Q.2
2 Read the given statements and conclusions carefully and decide which of the conclusions logically follow(s) from the statements.

Statements:

The national norm is 150 beds per thousand population, but in this state, 200 beds per thousand are available in the hospitals.

Conclusions:

- I. The state's norm is appropriate.
- II. The state's health system is taking adequate care in this regard.

- Ans 1. Neither conclusion I nor conclusion II follows.
2. Only conclusion I follows.
3. Only conclusion II follows.
4. Both conclusions I and II follow.

Question ID : 9895806518
Chosen Option : 4

Q.2
3 In the following number series, two numbers have been put within brackets. Study the series carefully and select the correct alternative with respect to the series.

0, 1, 4, 9, (15), 25, 36, 49, (64), 81

- Ans 1. Both the bracketed numbers are incorrect.
2. Both the bracketed numbers are correct.
- 3.
- The first bracketed number (from the left) is incorrect and the second is correct.
- 4.
- The first bracketed number (from the left) is correct and the second is incorrect.

Question ID : 9895806524
Chosen Option : 3

Q.2
4 Identify the odd one from the following.

- Ans
- 1. HL
 - 2. KN
 - 3. CG
 - 4. UY

Question ID : 9895806508
Chosen Option : 2

Q.2
5 Select the combination that will come next in the following series.

X	X0	XX	XX0	?
---	----	----	-----	---

- Ans
- 1. 0XX
 - 2. XXX
 - 3. XXX0
 - 4. X0X

Question ID : 9895806525
Chosen Option : 1

Q.2
6 What was the brand name of the first electric powered washing machine?

- Ans
- 1. Thor
 - 2. Images
 - 3. Icon
 - 4. Goliath

Question ID : 9895806570
Chosen Option : 1

Q.2
7 When was the Aadhaar (Targeted Delivery of Financial and Other Subsidies, Benefits and Services) Act passed?

- Ans
- 1. 2015
 - 2. 2017
 - 3. 2016
 - 4. 2014

Question ID : 9895806568
Chosen Option : 1

Q.2
8 What does Individual Vulnerability refer to in Economics?

- Ans
1. The threat to Intellectual property
 2. The threat of Exploitation
 3. The threat to health
 4. The threat of poverty

Question ID : 9895806565
Chosen Option : 2

Q.2
9 In the WTO's Agreement on Agriculture (AoA), what do the terms Green Box, Blue Box and AMS (Amber Box) stand for?

- Ans
1. Interest
 2. Subsidies
 3. Bonus
 4. Taxes

Question ID : 9895806566
Chosen Option : 4

Q.3
0 Which of the following animals hibernates?

- Ans
1. Tiger
 2. Bat
 3. Jackal
 4. Deer

Question ID : 9895806572
Chosen Option : 3

Q.3
1 Rungrado May Stadium, the largest football stadium in the world, is located in which country?

- Ans
1. China
 2. Singapore
 3. North Korea
 4. Spain

Question ID : 9895806560
Chosen Option : 3

Q.3
2 What is the highest peak of Pir Panjal Range?

- Ans
1. Indrasan
 2. Kabru
 3. Nanda Devi
 4. Kamet

Question ID : 9895806575
Chosen Option : 2

Q.3
3 Who is the Padma Bhushan awardee who guided ISRO to blast its heaviest ever rocket GSLV Mark-III, paving the road to manned space missions?

- Ans
- 1. Fali Nariman
 - 2. Manohar Parrikar
 - 3. K. Radhakrishnan
 - 4. Nandan Nilekani

Question ID : 9895806563
Chosen Option : 1

Q.3
4 Which country is the largest producer of mangoes as of 2018?

- Ans
- 1. Brazil
 - 2. Sri Lanka
 - 3. India
 - 4. China

Question ID : 9895806577
Chosen Option : 3

Q.3
5 Who invaded India in 326 BC after crossing the river Indus, advancing towards Taxila?

- Ans
- 1. Eduardo Barbosa
 - 2. Nicolini
 - 3. Marco Polo
 - 4. Alexander

Question ID : 9895806579
Chosen Option : 4

Q.3
6 'Paika' is a traditional dance form associated with which Indian state?

- Ans
- 1. Uttarakhand
 - 2. Jharkhand
 - 3. Sikkim
 - 4. Madhya Pradesh

Question ID : 9895806556
Chosen Option : 2

Q.3
7 Which of the following diseases is caused by bats?

- Ans
- 1. Dengue
 - 2. Zika
 - 3. Ebola
 - 4. Chikungunya

Question ID : 9895806574
Chosen Option : 3

Q.3
8 Which of the following options is an ancient literary source that sheds light on the ancient period of Indian history?

- Ans
- 1.

- 2. Bhagwat Gita
- 3. Upanishads
- 4. Sama Veda

Question ID : 9895806578
Chosen Option : 2

Q.3
9 In which country is the highest mountain peak of Africa Kilimanzaro located?

- Ans
- 1. Kenya
 - 2. Zambia
 - 3. Ghana
 - 4. Tanzania

Question ID : 9895806576
Chosen Option : 3

Q.4
0 Chaukhandi Stupa is a Buddhist monument located in which Indian state?

- Ans
- 1. Punjab
 - 2. Uttar Pradesh
 - 3. Sikkim
 - 4. West Bengal

Question ID : 9895806558
Chosen Option : 4

Q.4
1 'Jyotipunj' is a book written by:

- Ans
- 1. Narendra Modi
 - 2. Dhirubhai Ambani
 - 3. V.S. Naipaul
 - 4. Munshi Premchand

Question ID : 9895806562
Chosen Option : 3

Q.4
2 A deficiency of Vitamin A causes:

- Ans
- 1. Anaemia
 - 2. Goitre
 - 3. Night blindness
 - 4. Rickets

Question ID : 9895806573
Chosen Option : 3

Q.4
3 Which acids are present in most grapes?

- Ans
- 1. Hydrochloric and sulphuric acid
 - 2. Nitric and sulphuric

- 3. Tartaric and malic acid
- 4. Acetic acid and nitric acid

Question ID : 9895806571
Chosen Option : 3

Q.4
4 In which of the following Indian state was the game of polo born?

- Ans
- 1. Assam
 - 2. West Bengal
 - 3. Arunachal Pradesh
 - 4. Manipur

Question ID : 9895806559
Chosen Option : 3

Q.4
5 The Shanti Swaroop Bhatnagar Award is given in India for contribution to the field of:

- Ans
- 1. sports
 - 2. social work
 - 3. science and technology
 - 4. literature

Question ID : 9895806561
Chosen Option : 1

Q.4
6 In which city was the East India Association formed in the year 1866?

- Ans
- 1. Kolkata
 - 2. Singapore
 - 3. London
 - 4. Paris

Question ID : 9895806580
Chosen Option : 1

Q.4
7 In which amendment of the Constitution was the voting age reduced from 21 to 18 years?

- Ans
- 1. 56th
 - 2. 70th
 - 3. 65th
 - 4. 61st

Question ID : 9895806569
Chosen Option : 1

Q.4
8 Federalism is a system of government in which the powers is _____ between a central authority and various constituent units of the country.

- Ans
- 1. Divided
 - 2. Incited
 - 3. Derided

4. Indicted

Question ID : 9895806567
Chosen Option : 3

Q.4
9 'Teeyan' is a festival celebrated in which state of India?

- Ans
1. Gujarat
 2. Jammu and Kashmir
 3. Rajasthan
 4. Punjab

Question ID : 9895806557
Chosen Option : 1

Q.5
0 What does Buffer stock mean?

- Ans
1. A barrier on stock creation when surplus is available
 2. A reserve of commodities used to offset deficit
 3. A focus on production of one specific variety when there is a deficit
 4. A preventive measure to stop excessive distribution

Question ID : 9895806564
Chosen Option : 3

Q.5
1 Two trains are coming from opposite side at 40 km/hrs and 50 km/hrs from the different places 360 km apart. After how many hours two trains will meet to each other?

- Ans
1. 4 hrs
 2. 6 hrs
 3. 5 hrs
 4. 3 hrs

Question ID : 9895806619
Chosen Option : 2

Q.5
2 The greatest number that will divide 146, 248 and 611 leaving remainders 2,8 and 11 respectively is:

- Ans
1. 47
 2. 144
 3. 24
 4. 612

Question ID : 9895806606
Chosen Option : 3

Q.5
3

Study the Table Properly and answer by interpreting the data.

The table given the percentage of result by four different classes in the five different year of examination:

Year	Class – IX (Marks are in %)	Class – X (Marks are in %)	Class – XI (Marks are in %)	Class – XII (Marks are in %)
2012	90	80	85	75
2013	70	65	62	58
2014	65	35	32	33
2015	50	48	38	35
2016	55	45	32	38

In which class the average performance is least in all the five years?

- Ans 1. Class – XII
 2. Class – XI
 3. Class – IX
 4. Class – X

Question ID : 9895806629
Chosen Option : 3

Q.5
4 The value of $(6 \times 15) \div (2 \times 3) - 2^2 + 3$ is:

- Ans 1. 12
 2. 14
 3. 4
 4. 6

Question ID : 9895806607
Chosen Option : 3

Q.5
5 In a board examination, 75% of the total examinees passed. If the number of failures is 625, the total number of examinees is:

- Ans 1. 3800
 2. 2400
 3. 3600
 4. 2500

Question ID : 9895806614
Chosen Option : 2

Q.5
6 Study the Table Properly and answer by interpreting the data.

The table given the percentage of result by four different classes in the five different year of examination:

Year	Class – IX (Marks are in %)	Class – X (Marks are in %)	Class – XI (Marks are in %)	Class – XII (Marks are in %)
2012	90	80	85	75
2013	70	65	62	58
2014	65	35	32	33
2015	50	48	38	35
2016	55	45	32	38

What is the average percentage of marks in Class-IX in the year 2012 to 2016?

- Ans 1. 65%
 2. 72%
 3. 66%
 4. 62%

Question ID : 9895806628

Chosen Option : 2

Q.5
7 A mixture contains milk and water in the ratio of 4 : 3. When 5 liters of water is added to this mixture, the ratio of milk and water becomes 6 : 7. The quantity of milk in the mixture is:

- Ans
- 1. 12 liters
 - 2. 5 liters
 - 3. 15 liters
 - 4. 10 liters

Question ID : 9895806626
Chosen Option : 3

Q.5
8 A dining set having a sale price of ₹4000 is sold at a discount of 8%, thereby earning a profit of 10%. The cost price of the dining set is:

- Ans
- 1. ₹3345.45
 - 2. ₹3786.78
 - 3. ₹3568.80
 - 4. ₹3496.50

Question ID : 9895806613
Chosen Option : 2

Q.5
9 An amount of ₹4600 has been distributed between x, y & z in the ratio of $\frac{1}{2} : \frac{2}{3} : \frac{3}{4}$. The share of y is:

- Ans
- 1. 1600
 - 2. 2000
 - 3. 1200
 - 4. 1800

Question ID : 9895806625
Chosen Option : 1

Q.6
0 The ratio between the speeds of two trains is 3 : 4. The second train runs 800 km in 5 hrs, and speed of first train is:

- Ans
- 1. 120 km/hrs
 - 2. 140 km/hrs
 - 3. 180 km/hrs
 - 4. 160 km/hrs

Question ID : 9895806620
Chosen Option : 3

Q.6
1 In a cricket team, the average age of 11 players is 22 years. When the age of team coach is included to it, the average age increases by 1. The age of coach of the team is:

- Ans
- 1. 33 years
 - 2. 34 years
 - 3. 43 years
 - 4. 53 years

Question ID : 9895806610
Chosen Option : 3

Q.6
2 Sheela buys 3 pens for ₹24 and sold at 2 for ₹18 and 1 for ₹45. The profit or loss percent is:

- Ans 1. Loss 12.5%
2. Profit 12%
3. Loss 12%
4. Profit 12.5%

Question ID : 9895806612
Chosen Option : 4

Q.6 Sweta can paint a wall in 30 hours, while Ansul can paint it in 40 hours. If they paint it together and get payment of ₹14,000. What is Ansul's share?

- Ans 1. ₹6000/-
2. ₹12000/-
3. ₹10000/-
4. ₹8000/-

Question ID : 9895806617
Chosen Option : 3

Q.6 What will be the compound interest on ₹6000 at 3% per annum for 2 years compounded annually?

- Ans 1. ₹365.40
2. ₹653.20
3. ₹372.50
4. ₹725.10

Question ID : 9895806616
Chosen Option : 2

Q.6 The scores done by a bats man in a cricket series are 12, 25, 38, 56, 64, 86. What will be the median?

- Ans 1. 45
2. 56
3. 47
4. 38

Question ID : 9895806627
Chosen Option : 3

Q.6 A trader sold a machine for ₹18,800 and lost 6%. The cost price of the machine is:

- Ans 1. ₹22000
2. ₹24000
3. ₹20000
4. ₹18000

Question ID : 9895806611
Chosen Option : 2

Q.6 The ratio of the area of two triangles is 2 : 3 and ratio of their height is 3 : 2. The ratio of their bases is:

- Ans 1.
2. 4 : 9
3. 9 : 4

 4. 2 : 3

Question ID : 9895806621
Chosen Option : 4

Q.6
8 Study the Table Properly and answer by interpreting the data.

The table given the percentage of result by four different classes in the five different year of examination:

Year	Class – IX (Marks are in %)	Class – X (Marks are in %)	Class – XI (Marks are in %)	Class – XII (Marks are in %)
2012	90	80	85	75
2013	70	65	62	58
2014	65	35	32	33
2015	50	48	38	35
2016	55	45	32	38

In Which year the average performance is maximum in all the four classes?

- Ans  1. 2016
 2. 2015
 3. 2013
 4. 2012

Question ID : 9895806630
Chosen Option : 3

Q.6
9 The value of $62 - 5$ of $(18 - 14) + 5 \times 7$ is equal to:

- Ans  1. 18
 2. 28
 3. 15
 4. 77





Question ID : 9895806608
Chosen Option : 2

Q.7
0 If the radius of the circle is decreased by 10%. The percentage decreased in its areas is :

- Ans  1. 90%
 2. 110%
 3. 19%
 4. 91%

Question ID : 9895806623
Chosen Option : 3

Q.7
1 Simple interest on a certain sum is $\frac{16}{25}$ of the total sum. If rate percent and time are same, what will be the rate of interest?

- Ans  1. 6.8%
 2. 5%
 3. 12%
 4. 8%

Question ID : 9895806615
Chosen Option : 3

Q.7
2 The average of five consecutive numbers is 15. The highest of these number is:

- Ans 1. 12
 2. 19
 3. 17
 4. 15

Question ID : 9895806609
Chosen Option : 2

Q.7
3 Sanjya and Saumya together can finish a work in 9 days. Sanjya can do the same job on his own in 15 days. The same work Saumya can do by himself in:

- Ans 1. 14 days
 2. $15\frac{1}{2}$ days
 3. $22\frac{1}{2}$ days
 4. 22 days

Question ID : 9895806618
Chosen Option : 1

Q.7
4 The base of the parallelogram is twice of its height and its area is 288cm^2 . The base of the parallelogram is:

- Ans 1. 12cm
 2. 24cm
 3. 36cm
 4. 28cm

Question ID : 9895806622
Chosen Option : 3

Q.7
5 The mean proportional between 36 and 121 is equal to:

- Ans 1. 72
 2. 85
 3. 66
 4. 157

Question ID : 9895806624
Chosen Option : 3

Section : English Language

Q.1 From the given options, identify the segment in the sentence which contains the grammatical error.

Pragati Maidan is the famous international exhibition centre at Delhi for trade fairs.

- Ans 1. for trade fairs
 2. Pragati Maidan is
 3. at Delhi
 4. the famous

Question ID : 9895806181
Chosen Option : 4

Q.2

Select the synonym of the given word.

PROBABLE

- Ans
1. Tangible
 2. Substitute
 3. Likely
 4. Similar

Question ID : 9895806195
Chosen Option : 4

Q.3 From the given options, identify the segment in the sentence which contains the grammatical error.

Japan will be a country well known for its culture, technology and cuisines like sushi.

- Ans
1. will be a country
 2. well known for
 3. cuisines like
 4. its culture

Question ID : 9895806180
Chosen Option : 3

Q.4 Select the most appropriate option to substitute the underlined segment in the given sentence. If there is no need to substitute it, select No improvement.

He work in a shop which makes handicraft goods.

- Ans
1. works in a shop which make
 2. works in a shop which makes
 3. No improvement
 4. working in a shop which makes

Question ID : 9895806184
Chosen Option : 4

Q.5 From the given options, identify the segment in the sentence which contains the grammatical error.

The country also needs large doses of infrastructure additions – roads or highways, power plants, distribution networks, airports and ports.

- Ans
1. airports and ports
 2. also needs
 3. roads or highways
 4. The country

Question ID : 9895806182
Chosen Option : 2

Q.6 Select the word which means the same as the group of words given.

One that has life

- Ans
1. Mortal
 2. Animate
 3. Inanimate

 4. Conscious

Question ID : 9895806200
Chosen Option : 1



Comprehension:

In the following passage some words have been deleted. Fill in the blanks with the help of the alternatives given.

Bird-watching, as it is popularly called, is a peaceful (1) _____. It is not entirely without occasional physical thrills and even (2) _____. The elephant ridden jungles in South India, for instance. I found myself in uncomfortably disturbing (3) _____. Actually, there is little danger from a wild elephant unless it happens to be a female with a small (4) _____ along with her. What such situations demand is (5) _____ and not valour.

SubQuestion No : 7

Q.7 Select the most appropriate option that will fill in the blank number 1.

- Ans
- 1. job
 -  2. service
 - 3. activity
 -  4. work

Question ID : 9895806189
Chosen Option : 3



Comprehension:

In the following passage some words have been deleted. Fill in the blanks with the help of the alternatives given.

Bird-watching, as it is popularly called, is a peaceful (1) _____. It is not entirely without occasional physical thrills and even (2) _____. The elephant ridden jungles in South India, for instance. I found myself in uncomfortably disturbing (3) _____. Actually, there is little danger from a wild elephant unless it happens to be a female with a small (4) _____ along with her. What such situations demand is (5) _____ and not valour.

SubQuestion No : 8

Q.8 Select the most appropriate option that will fill in the blank number 2.

- Ans
-  1. conditions
 - 2. hazards
 - 3. pleasures
 -  4. circumstances

Question ID : 9895806190
Chosen Option : 1

Comprehension:

In the following passage some words have been deleted. Fill in the blanks with the help of the alternatives given.

Bird-watching, as it is popularly called, is a peaceful (1) _____. It is not entirely without occasional physical thrills and even (2) _____. The elephant ridden jungles in South India, for instance. I found myself in uncomfortably disturbing (3) _____. Actually, there is little danger from a wild elephant unless it happens to be a female with a small (4) _____ along with her. What such situations demand is (5) _____ and not valour.

SubQuestion No : 9

Q.9 Select the most appropriate option that will fill in the blank number 3.

- Ans
- 1. zones
 - 2. atmospheres
 - 3. situations
 - 4. locations

Question ID : 9895806191
Chosen Option : 3

Comprehension:

In the following passage some words have been deleted. Fill in the blanks with the help of the alternatives given.

Bird-watching, as it is popularly called, is a peaceful (1) _____. It is not entirely without occasional physical thrills and even (2) _____. The elephant ridden jungles in South India, for instance. I found myself in uncomfortably disturbing (3) _____. Actually, there is little danger from a wild elephant unless it happens to be a female with a small (4) _____ along with her. What such situations demand is (5) _____ and not valour.

SubQuestion No : 10

Q.10 Select the most appropriate option that will fill in the blank number 4.

- Ans
- 1. cub
 - 2. calf
 - 3. pup
 - 4. kitten

Question ID : 9895806192
Chosen Option : 3

Comprehension:

In the following passage some words have been deleted. Fill in the blanks with the help of the alternatives given.

Bird-watching, as it is popularly called, is a peaceful (1) _____. It is not entirely without occasional physical thrills and even (2) _____. The elephant ridden jungles in South India, for instance. I found myself in uncomfortably disturbing (3) _____. Actually, there is little danger from a wild elephant unless it happens to be a female with a small (4) _____ along with her. What such situations demand is (5) _____ and not valour.

SubQuestion No : 11

Q.1
1 Select the most appropriate option that will fill in the blank number 5.

- Ans
1. loyalty
 2. honesty
 3. forgetfulness
 4. discretion

Question ID : 9895806193
Chosen Option : 2

Q.1
2 Select the correctly spelt word.

- Ans
1. Accessories
 2. Accessories
 3. Accessories
 4. Accesories

Question ID : 9895806202
Chosen Option : 4

Q.1
3 Select the most appropriate word to fill in the blank.

Pollution of rivers and seas destroys _____ life.

- Ans
1. Aerial
 2. Marine
 3. Desert
 4. Terrestrial

Question ID : 9895806204
Chosen Option : 3

Q.1
4 Select the most appropriate option to fill in the blank.

Their wages were very low, so the workers went on a _____.

- Ans
1. strike
 2. leave
 3. strife
 4. conflict

Q.1
5 Select the most appropriate ANTONYM of the given word.

COARSE

- Ans 1. Fine
 2. Texture
 3. Rough
 4. Glossy

Q.1
6 Select the option that means the same as the given idiom.

Run of the mill

- Ans 1. Ordinary
 2. Rare
 3. Exceptional
 4. Uncommon

Q.1
7 Select the most appropriate option to fill in the blank.

Ten million people watch this television _____ every week.

- Ans 1. incident
 2. event
 3. programme
 4. media

Q.1
8 Select the synonym of the given word.

LETHARGY

- Ans 1. Delight
 2. Thrill
 3. Wisdom
 4. Fatigue

Q.1
9 Select the most appropriate word to fill in the blank.

People have used indigenous plants for _____ of ailments since ancient times.

- Ans 1. treatment
 2. exclusion
 3. adulteration
4. pollution

Question ID : 9895806205
Chosen Option : 1

Q.2
0 Select the option that means the same as the given idiom.

Man of letters

- Ans 1. A student
 2. A scholar
 3. One who writes letters
 4. One who can read letters

Question ID : 9895806199
Chosen Option : 4

Q.2
1 Select the word which means the same as the group of words given.

Those that feed only on plants

- Ans 1. Omnivorous
2. Predatory
3. Amphibian
 4. Herbivorous

Question ID : 9895806201
Chosen Option : 3

Q.2
2 Select the correctly spelt word.

- Ans 1. Greivance
 2. Grievanse
 3. Grievence
 4. Grievance

Question ID : 9895806203
Chosen Option : 3

Q.2
3 Select the most appropriate option to substitute the underlined segment in the given sentence. If there is no need to substitute it, select No improvement.

It's getting dark, can you switch the lights please?

- Ans 1. No improvement
2. can you switch on the lights please?
3. can you switch of the lights please?
4. can you on the lights please?

Question ID : 9895806183
Chosen Option : 4

Q.2
4 Select the antonym of the given word.

WHOLESALE

- Ans 1. Discount
 2. Retail
 3. Concession
 4. Rebate

Question ID : 9895806196
Chosen Option : 3

Q.2
5 Select the most appropriate option to substitute the underlined segment in the given sentence. If there is no need to substitute it, select No improvement.

If he remains absent from the college, he will have to pay a fine.

- Ans 1. If he is remain absent from
 2. No improvement
 3. If he is remaining absent from
 4. If he will remains absent from

Question ID : 9895806185
Chosen Option : 3

Section : Hindi Language

Q.1 दिए गए शब्द के पर्यायवाची शब्द का चयन करें।

शेर

- Ans 1. अनल
 2. राकेश
 3. धेनु
 4. मृगेन्द्र

Question ID : 9895805990
Chosen Option : --

Q.2 रिक्त स्थान को भरने के लिए उपयुक्त शब्द का चयन करें।

वे पार्क में _____ कर रहे हैं।

- Ans 1. चल
 2. घूम
 3. भाग
 4. भ्रमण

Question ID : 9895805980
Chosen Option : --

Q.3 दिए गए शब्द के पर्यायवाची शब्द का चयन करें।

तलवार

- Ans 1. तड़ाग
 2. क्षीर
 3. वसन
 4. खड्ग

Question ID : 9895805991
Chosen Option : --

Q.4 सही वर्तनी वाले शब्द का चयन करें।

- Ans 1. पंखुड़ी
 2. पंखूड़ी
 3. पनखुड़ी
 4. पन्खुड़ी

Question ID : 9895805997
Chosen Option : --

Q.5 निम्नलिखित में से उस विकल्प का चयन करें जो 'पेट पर लात मारना' मुहावरे का अर्थ व्यक्त करता है।

- Ans 1. बहुत भूख लगना
 2. पेट पर लात मार कर लड़ना
 3. लात से पेट पर चोट पहुँचाना
 4. आजीविका से वंचित करना

Question ID : 9895805993
Chosen Option : --

Q.6 सही वर्तनी वाले शब्द का चयन करें।

- Ans 1. मुरलीधर
 2. मूर्लीधर
 3. मुरलीदर
 4. मुरलिदर

Question ID : 9895805996
Chosen Option : --

Comprehension:

निम्नलिखित गद्यांश के रिक्त स्थानों की पूर्ति गद्यांश के नीचे दिए गए प्रश्नों के अनुसार कीजिए -

भारतवर्ष अपनी चित्रकला, शिल्पकला और वास्तुकला के लिए पूरे विश्व में _____ (1) है। आगरा में यमुना तट पर स्थित ताजमहल वास्तुकला का एक अद्भुत _____ (2) है। अपनी निर्माणकला के कारण ही यह विश्व के सात _____ (3) में से एक है। सफेद संगमरमर से बने ताज की _____ (4) सुंदरता को देखकर विदेशी पर्यटक दाँतों तले उँगली दबा लेते हैं। ताजमहल का निर्माण बादशाह शाहजहाँ ने अपनी बेगम मुमताज की _____ (5) में करवाया था।

SubQuestion No : 7

Q.7 गद्यांश में संकेतित रिक्त स्थान (1) के लिए उपयुक्त शब्द होगा -

- Ans
1. प्रसिद्ध
 2. अज्ञात
 3. महान
 4. सम्मान

Question ID : 9895805983
Chosen Option : --

Comprehension:

निम्नलिखित गद्यांश के रिक्त स्थानों की पूर्ति गद्यांश के नीचे दिए गए प्रश्नों के अनुसार कीजिए -

भारतवर्ष अपनी चित्रकला, शिल्पकला और वास्तुकला के लिए पूरे विश्व में _____ (1) है। आगरा में यमुना तट पर स्थित ताजमहल वास्तुकला का एक अद्भुत _____ (2) है। अपनी निर्माणकला के कारण ही यह विश्व के सात _____ (3) में से एक है। सफेद संगमरमर से बने ताज की _____ (4) सुंदरता को देखकर विदेशी पर्यटक दाँतों तले उँगली दबा लेते हैं। ताजमहल का निर्माण बादशाह शाहजहाँ ने अपनी बेगम मुमताज की _____ (5) में करवाया था।

SubQuestion No : 8

Q.8 गद्यांश में संकेतित रिक्त स्थान (2) के लिए उपयुक्त शब्द होगा -

- Ans
1. कला
 2. नमूना

✗ 3. तस्वीर

✗ 4. चित्र

Question ID : 9895805984
Chosen Option : --

Comprehension:

निम्नलिखित गद्यांश के रिक्त स्थानों की पूर्ति गद्यांश के नीचे दिए गए प्रश्नों के अनुसार कीजिए -

भारतवर्ष अपनी चित्रकला, शिल्पकला और वास्तुकला के लिए पूरे विश्व में _____ (1) है। आगरा में यमुना तट पर स्थित ताजमहल वास्तुकला का एक अद्भुत _____ (2) है। अपनी निर्माणकला के कारण ही यह विश्व के सात _____ (3) में से एक है। सफेद संगमरमर से बने ताज की _____ (4) सुंदरता को देखकर विदेशी पर्यटक दाँतों तले उँगली दबा लेते हैं। ताजमहल का निर्माण बादशाह शाहजहाँ ने अपनी बेगम मुमताज की _____ (5) में करवाया था।

SubQuestion No : 9

Q.9 गद्यांश में संकेतित रिक्त स्थान (3) के लिए उपयुक्त शब्द होगा -

Ans

✗ 1. अजूबों

✗ 2. प्रमाणों

✓ 3. अजीबों

✗ 4. कल्पनाओं

Question ID : 9895805985
Chosen Option : --

Comprehension:

निम्नलिखित गद्यांश के रिक्त स्थानों की पूर्ति गद्यांश के नीचे दिए गए प्रश्नों के अनुसार कीजिए -

भारतवर्ष अपनी चित्रकला, शिल्पकला और वास्तुकला के लिए पूरे विश्व में _____ (1) है। आगरा में यमुना तट पर स्थित ताजमहल वास्तुकला का एक अद्भुत _____ (2) है। अपनी निर्माणकला के कारण ही यह विश्व के सात _____ (3) में से एक है। सफेद संगमरमर से बने ताज की _____ (4) सुंदरता को देखकर विदेशी पर्यटक दाँतों तले उँगली दबा लेते हैं। ताजमहल का निर्माण बादशाह शाहजहाँ ने अपनी बेगम मुमताज की _____ (5) में करवाया था।

SubQuestion No : 10

Q.1
0 गद्यांश में संकेतित रिक्त स्थान (4) के लिए उपयुक्त शब्द होगा -

- Ans
1. आकर्षण
 2. अनुपम
 3. भयंकर
 4. स्वच्छ

Question ID : 9895805986
Chosen Option : --

Comprehension:

निम्नलिखित गद्यांश के रिक्त स्थानों की पूर्ति गद्यांश के नीचे दिए गए प्रश्नों के अनुसार कीजिए -

भारतवर्ष अपनी चित्रकला, शिल्पकला और वास्तुकला के लिए पूरे विश्व में _____ (1) है। आगरा में यमुना तट पर स्थित ताजमहल वास्तुकला का एक अद्भुत _____ (2) है। अपनी निर्माणकला के कारण ही यह विश्व के सात _____ (3) में से एक है। सफेद संगमरमर से बने ताज की _____ (4) सुंदरता को देखकर विदेशी पर्यटक दाँतों तले उँगली दबा लेते हैं। ताजमहल का निर्माण बादशाह शाहजहाँ ने अपनी बेगम मुमताज की _____ (5) में करवाया था।

SubQuestion No : 11

Q.1
1 गद्यांश में संकेतित रिक्त स्थान (5) के लिए उपयुक्त शब्द होगा -

- Ans
1. प्रभाव

2. याद
 3. खुशी
 4. उत्सव

Question ID : 9895805987
Chosen Option : --

Q.1
2 दिए गए वाक्य का वह भाग ज्ञात करें जिसमें कोई त्रुटि है।

राजनीतिक दल आपसी तनाव की लाभ उठाकर राजनीतिक स्वार्थ पूरा करते हैं।

- Ans
1. राजनीतिक स्वार्थ
 2. राजनीतिक दल
 3. पूरा करते हैं।
 4. आपसी तनाव की लाभ उठाकर

Question ID : 9895805974
Chosen Option : --

Q.1
3 रिक्त स्थान को भरने के लिए उपयुक्त शब्द का चयन करें।

उसने चोरी ही _____ बल्कि हत्या भी की।

- Ans
1. की
 2. और
 3. नहीं
 4. परंतु

Question ID : 9895805978
Chosen Option : --

Q.1
4 दिये गये वाक्यांश के लिए एक शब्द दीजिये।

जिसका इलाज न हो सके

- Ans
1. साध्य
 2. असाध्य
 3. दुस्साध्य
 4. कुंठा

Question ID : 9895805995
Chosen Option : --

Q.1
5 दिए गए वाक्य का वह भाग ज्ञात करें जिसमें कोई त्रुटि है।

संत-महात्मा अपना सादगी और पवित्रता के कारण लोकप्रिय होते हैं।

- Ans
1. संत-महात्मा
 2. लोकप्रिय होते हैं।

3. अपना सादगी
4. और पवित्रता के कारण

Question ID : 9895805973
Chosen Option : --

Q.1
6 दिए गए वाक्य का वह भाग ज्ञात करें जिसमें कोई त्रुटि है।

यदि नदियाँ नहीं बचाई गईं तो इनका अस्तित्व ही समाप्त हो जाएगी।

Ans

1. इनका अस्तित्व ही
2. नहीं बचाई गईं तो
3. यदि नदियाँ
4. समाप्त हो जाएगी।

Question ID : 9895805972
Chosen Option : --

Q.1
7 निम्नलिखित में से उस विकल्प का चयन करें जो 'पिंड छुड़ाना' मुहावरे का अर्थ व्यक्त करता है।

Ans

- ✓ 1. पीछा छुड़ाना
2. पीछे पड़ना
3. पीछे लगाना
4. पीछा करना

Question ID : 9895805992
Chosen Option : --

Q.1
8 दिए गए वाक्य में रेखांकित खंड को प्रतिस्थापित करने के लिए उपयुक्त विकल्प का चयन करें।

मैंने अपनी किताब अपने मित्र को दे दी।

Ans

- ✗ 1. महाकाव्य
2. स्वयं
3. पुस्तक
- ✗ 4. खण्डकाव्य

Question ID : 9895805977
Chosen Option : --

Q.1
9 दिये गये वाक्यांश के लिए एक शब्द दीजिये।

जो उपकार को माने

Ans

1. कर्मज
2. कृतज
3. कृतघ्न
- ✗ 4. कर्मठ

Question ID : 9895805994

Q.2
0 दिए गए शब्द का विलोम चुनें।

वाचाल

Ans

- ✓ 1. मृदुभाषी
2. मितभाषी
3. निर्दोषी
4. सुभाषी

Question ID : 9895805988

Chosen Option : --

Q.2
1 दिए गए वाक्य में रेखांकित खंड को प्रतिस्थापित करने के लिए उपयुक्त विकल्प का चयन करें।

शिकारी ने सिंह पर गोली चलाई, पर वह बच निकला।

Ans

1. बैरी
2. हिरण
3. मृगेंद्र
4. जंगल

Question ID : 9895805976

Chosen Option : --

Q.2
2 रिक्त स्थान को भरने के लिए उपयुक्त शब्द का चयन करें।

लड़का लड़की एक _____ हैं।

Ans

1. रिश्ता
✗ 2. भाग
✗ 3. समान
4. जैसा

Question ID : 9895805981

Chosen Option : --

Q.2
3 रिक्त स्थान को भरने के लिए उपयुक्त शब्द का चयन करें।

भारत को स्वच्छ बनाने के लिए हर नागरिक की _____ की आवश्यकता है।

Ans

1. जमींदारी
2. भागीदारी
3. जहाँगीरदारी
4. चौकीदारी

Question ID : 9895805979

Chosen Option : --

4 दिए गए शब्द का विलोम चुनें।

प्रसन्न

Ans

1. प्रफुल्ल
2. हर्षित
3. खिन्न
4. उल्लसित

Question ID : 9895805989
Chosen Option : --

Q.2 दिए गए वाक्य में रेखांकित खंड को प्रतिस्थापित करने के लिए उपयुक्त विकल्प का चयन करें।

जीवन में सफलता पाने का मुख्य साधन समय से नयोजन है।

Ans

1. समय में नयोजन है।
2. समय की नयोजन है।
3. समय को नयोजन है।
4. समय का नयोजन है।

Question ID : 9895805975
Chosen Option : --