

**SSC
GD**

**Previous Year Paper
24 Nov 2021 Shift 1**

Constable GD in CAPFs NIA SSF and Rifleman GD in Assam Rifles Examination 2021

Roll Number	
Candidate Name	
Venue Name	iON Digital Zone iDZ 2 Moula Ali
Exam Date	24/11/2021
Exam Time :	9:00 AM - 10:30 AM
Subject	Constable GD 2021

Section : Part A General Intelligence and Reasoning

Q.1 Eight friends, K, L, M, N, O, P, Q and R, are sitting at two circular tables, one smaller inner table and one bigger outer table. Both the circular tables have the same centre. Four persons are sitting at each table at equal distances between them, facing the centre. M is to the immediate right of L. Q and N are sitting in the south and are facing R and L. M is sitting opposite to O at the same table. P is sitting opposite K at the outer table. N is between P and K at the same table. L is between M and O at the same table. Who is sitting in the north at the outer table?

- Ans
- 1. K
 - 2. P
 - 3. R
 - 4. L

Question ID : 65497829863
Status : Not Answered
Chosen Option : -

Q.2 Read the given statements and conclusions carefully. Assuming that the information given in the statements is true, even if it appears to be at variance with commonly known facts, decide which of the given conclusions logically follow(s) from the statements.

Statements:
All rats are dogs.
Some rats are hens.

Conclusions:
I. Some rats are dogs.
II. Some hens are rats.

- Ans
- 1. Only conclusion I follows
 - 2. Neither conclusion I nor II follows
 - 3. Only conclusion II follows
 - 4. Both conclusions I and II follow

Question ID : 65497829877
Status : Answered
Chosen Option : 4

Q.3 Select the Venn diagram that best represents the relationship between the following classes.

Niece, Beauticians, Women

Ans



Question ID : 65497829875
Status : Answered
Chosen Option : 1

Q.4 Select the option that is related to the third number in the same way as the second number is related to the first number and the sixth number is related to the fifth number.

7 : 113 :: 11 : ? :: 15 : 481

Ans ✗ 1. 388

✗ 2. 155

✗ 3. 340

✓ 4. 265

Question ID : 65497829864
Status : Answered
Chosen Option : 2

Q.5 The ages of two sisters Rajini and Rani are in the proportion of 2 : 3. After 6 years, the proportion of their ages will be 3 : 4. What is the current age of Rajini?

Ans ✗ 1. 14 years

✗ 2. 16 years

✗ 3. 18 years

✓ 4. 12 years

Question ID : 65497829879
Status : Answered
Chosen Option : 4

Q.6 Select the number from among the given options that can replace the question mark (?) in the following series.

2, 5, 11, 17, ?, 31, 41

- Ans 1. 23
 2. 25
 3. 21
 4. 29

Question ID : 65497829870
Status : Answered
Chosen Option : 1

Q.7 In a certain code language, 'RAT' is coded as '39' and 'DOG' is coded as '26'. How will 'YAK' be coded in that language?

- Ans 1. 31
 2. 37
 3. 25
 4. 43

Question ID : 65497829869
Status : Answered
Chosen Option : 2

Q.8 Pointing towards a boy, Ranjita said, "He is my husband's father-in-law's only daughter's son's father's only sister's son". How is that boy's mother related to Ranjita's husband?

- Ans 1. Daughter
 2. Paternal aunt
 3. Mother
 4. Sister

Question ID : 65497829887
Status : Not Answered
Chosen Option : -

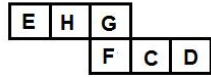
Q.9 Select the option that is related to the third term in the same way as the second term is related to the first term.

TONGUE : PUHOFV :: MASTER : ?

- Ans 1. PCTHVS
 2. TBOSFU
 3. BNUTSF
 4. SFUTBN

Question ID : 65497829885
Status : Not Answered
Chosen Option : -

Q.10 A cube is made by folding the given sheet. In the cube so formed, which letter will be on the face opposite to the face showing 'C'?



- Ans
- 1. H
 - 2. E
 - 3. G
 - 4. F

Question ID : 65497829866
Status : Answered
Chosen Option : 1

Q.11 'Viticulture' is related to 'Grapes' in the same way as 'Floriculture' is related to '_____'.
Ans

- 1. Silkworm
- 2. Fluorine
- 3. Flowers
- 4. Plants

Question ID : 65497829873
Status : Answered
Chosen Option : 3

Q.12 Select the letter-cluster from among the given options that can replace the question mark (?) in the following series.

SRQ, PON, ?, JIH, GFE

- Ans
- 1. MLK
 - 2. LKM
 - 3. KLM
 - 4. MKL

Question ID : 65497829872
Status : Answered
Chosen Option : 1

Q.13 In a certain code language, 'FLOAT' is written as 'ROU', 'CLAIM' is written as 'OAV'. How will 'ARMED' be written in that language?
Ans

- 1. RFC
- 2. DMK
- 3. SMI
- 4. TFE

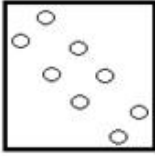
Question ID : 65497829886
Status : Answered
Chosen Option : 3

Q.14 The sequence of folding a piece of paper and the manner in which the folded paper has been cut is shown in the following figures. How would this paper look when unfolded?

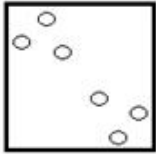


Ans

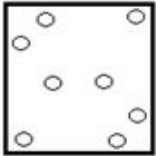
✓ 1.



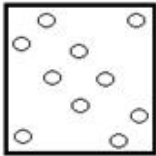
✗ 2.



✗ 3.



✗ 4.



Question ID : 65497829880

Status : Answered

Chosen Option : 1

Q.15 Study the given pattern carefully and select the number that can replace the question mark (?) in it.

6 15 48

7 17 55

13 29 ?

Ans ✗ 1. 79

✗ 2. 78

✓ 3. 97

✗ 4. 87

Question ID : 65497829878

Status : Not Answered

Chosen Option : -

Q.16 What will be the value of the given expression if 'A' means '+', 'B' means '-', 'C' means 'x', and 'D' means '÷'?

$$36 A (15 C 4) B (21 A 13) A 24 D (16 D 2) = ?$$

- Ans
- 1. 96
 - 2. 83
 - 3. 65
 - 4. 51

Question ID : 65497829865
Status : Answered
Chosen Option : 3

Q.17 Select the combination of letters that when sequentially placed in the blanks of the given series, will complete the series.

O _ K M _ O P K _ A O _ _ M A

- Ans
- 1. P A M P O
 - 2. P M A P K
 - 3. M A K A P
 - 4. P A M P K

Question ID : 65497829882
Status : Answered
Chosen Option : 4

Q.18 Select the option that is NOT embedded in the given figure (rotation is NOT allowed).



- Ans
- 1.
 - 2.
 - 3.
 - 4.

Question ID : 65497829867
Status : Answered
Chosen Option : 2

Q.19 Select the number from among the given options that can replace the question mark (?) in the following series.

6, 22, 70, 214, ?, 1942

- Ans 1. 646
 2. 638
 3. 280
 4. 430

Question ID : 65497829883
Status : Answered
Chosen Option : 1

Q.20 In a certain code language, 'LAYOUT' is written as 'WRRVDI'. How will 'CHETAK' be written in that language?

- Ans 1. HQXEBF
 2. NWXKBZ
 3. HXQBEF
 4. NXWBKZ

Question ID : 65497829876
Status : Answered
Chosen Option : 4

Q.21 Select the correct option that indicates the arrangement of the given words in the order in which they appear in an English dictionary.

1. Acoustic
2. Academy
3. Accent
4. Accord
5. Active

- Ans 1. 2, 3, 4, 1, 5
 2. 2, 4, 3, 1, 5
 3. 2, 3, 4, 5, 1
 4. 2, 3, 1, 4, 5

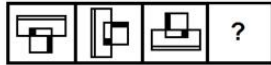
Question ID : 65497829881
Status : Answered
Chosen Option : 1

Q.22 P, Q, R, S, T, U and V are sitting in a row on a wall facing towards the west. R is just to the left of S. Q is at one of the end points and T is his neighbour. V is sitting between T and U. S is fifth from the north end. Who among the following persons is sitting exactly in the middle of the row?

- Ans 1. U
 2. V
 3. T
 4. Q

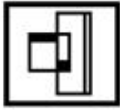
Question ID : 65497829874
Status : Not Answered
Chosen Option : -

Q.23 Select the figure from among the given options that can replace the question mark (?) in the following series.

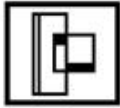


Ans

✗ 1.



✗ 2.



✗ 3.

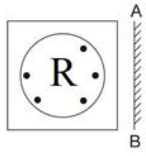


✓ 4.



Question ID : 65497829884
Status : Answered
Chosen Option : 4

Q.24 Select the correct mirror image of the given figure when the mirror is placed at 'AB' as shown.




Ans

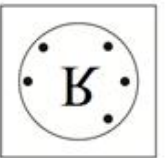
✓ 1.



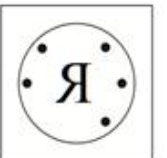
✗ 2.



✗ 3.



✗ 4.



Question ID : 65497829871
Status : Answered
Chosen Option : 1

Q.25 Four letter-clusters have been given, out of which three are alike in some manner and one is different. Select the letter-cluster that is different.

Ans ✗ 1. FHLR

✗ 2. DFJP

✗ 3. NPTZ

✓ 4. GIMU

Question ID : 65497829868
Status : Answered
Chosen Option : 4

Q.1 Which of the following statements about Emperor Ashoka is FALSE?

- Ans 1. Ashoka was opposed by a wise man named Chanakya (also known as Kautilya).
 2. Ashoka belonged to the Mauryan dynasty.
 3. The empire that Ashoka ruled was founded by his grandfather.
 4. Ashoka is the only king in the history of the world who gave up conquest after winning a war.

Question ID : 65497829910
Status : Answered
Chosen Option : 3

Q.2 In September 2021, _____ became the first Indian woman to win two Paralympic medals.

- Ans 1. Bhavina Patel
 2. Avani Lekhara
 3. Ekta Bhyan
 4. Deepa Malik

Question ID : 65497829905
Status : Answered
Chosen Option : 1

Q.3 Which of the following countries hosted the Asia Pacific Economic Cooperation in November 2020?

- Ans 1. Malaysia
 2. Hong Kong
 3. Japan
 4. Singapore

Question ID : 65497829901
Status : Answered
Chosen Option : 4

Q.4 Under the _____ system of land revenue, the ownership rights were handed over to the peasants and the British Government collected taxes directly from them.

- Ans 1. Ryotwari
 2. Mahalwari
 3. Malguzari
 4. Taluqdar

Question ID : 65497829907
Status : Answered
Chosen Option : 1

Q.5 A _____ is a passive two-terminal electrical component that implements electrical resistance as a circuit element.

- Ans
- 1. transistor
 - 2. resistor
 - 3. diode
 - 4. capacitor

Question ID : 65497829890
Status : Answered
Chosen Option : 1

Q.6 Which of the following is another name for Vitamin K1?

- Ans
- 1. Phylloquinone
 - 2. Nicotinic acid
 - 3. Thiamine
 - 4. Riboflavin

Question ID : 65497829889
Status : Answered
Chosen Option : 1

Q.7 Article _____ of the Constitution of India deals with Administration of Union Territories.

- Ans
- 1. 233
 - 2. 239
 - 3. 224
 - 4. 228

Question ID : 65497829911
Status : Not Answered
Chosen Option : -

Q.8 What is the maximum amount of loan permissible under the 'Shishu scheme' of the Pradhan Mantri MUDRA Yojana?

- Ans
- 1. ₹2,00,000
 - 2. ₹5,00,000
 - 3. ₹1,00,000
 - 4. ₹50,000

Question ID : 65497829896
Status : Not Answered
Chosen Option : -

Q.9 Who among the following is the author of the book 'The Day I Stopped Drinking Milk'?

- Ans 1. Twinkle Khanna
 2. Roshni Nilkani
 3. Sudha Murty
 4. Nita Ambani

Question ID : 65497829891
Status : Not Answered
Chosen Option : -

Q.10 Jawai Bandh is a reservoir built across Jawai River, which is a tributary of the:

- Ans 1. Luni river
 2. Banas river
 3. Chambal river
 4. Mahi river

Question ID : 65497829897
Status : Not Answered
Chosen Option : -

Q.11 Padma Shri awardee Sitara Devi was known for her contribution to the field of _____.

- Ans 1. Kathak
 2. Odissi
 3. Mudi yettu
 4. Sattriya

Question ID : 65497829892
Status : Answered
Chosen Option : 1

Q.12 Who won the Women's Singles title at the US Open 2020 tennis tournament?

- Ans 1. Naomi Osaka
 2. Maria Sharapova
 3. Victoria Azarenka
 4. Serena Williams

Question ID : 65497829898
Status : Answered
Chosen Option : 1

Q.13 The highest peak of the Aravalli range is located in _____.

- Ans 1. Gujarat
 2. Delhi
 3. Rajasthan
 4. Haryana

Question ID : 65497829904
Status : Answered
Chosen Option : 1

Q.14 What was India's rank in the Ease of Doing Business Index 2020?

- Ans 1. 54
 2. 63
 3. 71
 4. 67

Question ID : 65497829899
Status : Answered
Chosen Option : 1

Q.15 In September 2021, Coal India Ltd. started a pilot project to replace use of diesel with _____ in dumpers.

- Ans 1. hydrogen
 2. ethanol
 3. liquefied natural gas (LNG)
 4. compressed natural gas (CNG)

Question ID : 65497829908
Status : Answered
Chosen Option : 1

Q.16 Who among the following is the author of the play 'Wedding Album'?

- Ans 1. Badal Sarkar
 2. Mahesh Dattani
 3. Girish Karnad
 4. Vijay Tendulkar

Question ID : 65497829894
Status : Not Answered
Chosen Option : -

Q.17 6 April 1919 was observed as a day of non-violent opposition to _____.

- Ans 1. the Simon Commission
 2. the Rowlatt Act
 3. the Cabinet Mission Plan
 4. the Morely-Minto Reforms

Question ID : 65497829909
Status : Answered
Chosen Option : 2

Q.18 Which of the following pieces is NOT allowed to move backward on a chess board?

- Ans 1. Bishop
 2. Pawn
 3. King
 4. Queen

Question ID : 65497829895
Status : Answered
Chosen Option : 1

Q.19 The Zika virus disease is caused by a virus transmitted primarily by the _____ species of mosquitoes.

- Ans 1. Culex
 2. Anopheles
 3. Aedes
 4. Haemagogus

Question ID : 65497829906
Status : Not Answered
Chosen Option : -

Q.20 Which of the following is a ferrous mineral?

- Ans 1. Manganese
 2. Copper
 3. Bauxite
 4. Zinc

Question ID : 65497829893
Status : Answered
Chosen Option : 3

Q.21 In which of the following years was the 'Pradhan Mantri Ujjwala Yojana' launched?

- Ans 1. 2014
 2. 2018
 3. 2020
 4. 2016

Question ID : 65497829902
Status : Answered
Chosen Option : 2

Q.22 In which Schedule of the Constitution of India is the language 'Hindi' included?

- Ans 1. Tenth
 2. Fourth
 3. Fifth
 4. Eighth

Question ID : 65497829900
Status : Answered
Chosen Option : 4

Q.23 In June 2021, the Ministry of Heavy Industries increased the subsidy for electric two-wheelers to _____ per kWh under the FAME India Scheme Phase II.

- Ans
- 1. ₹10,000
 - 2. ₹20,000
 - 3. ₹25,000
 - 4. ₹15,000

Question ID : 65497829912
Status : Not Answered
Chosen Option : -

Q.24 In which of the following cities is the Dev-Deepawali' festival celebrated?

- Ans
- 1. Ujjain
 - 2. Ayodhya
 - 3. Varanasi
 - 4. Prayagraj

Question ID : 65497829888
Status : Not Answered
Chosen Option : -

Q.25 In which year was the Oudh Kisan Sabha set up?

- Ans
- 1. 1930
 - 2. 1925
 - 3. 1920
 - 4. 1928

Question ID : 65497829903
Status : Not Answered
Chosen Option : -

Section : Part C Elementary Mathematics

Q.1 In a transaction, the profit percentage is 70% of the cost. If the cost further increases by 40%, but the selling price remains the same, what is the difference between the two profit percentages?

- Ans
- 1. 48.57%
 - 2. 40.57%
 - 3. 45.87%
 - 4. 40.0%

Question ID : 65497829918
Status : Answered
Chosen Option : 4

Q.2 An automobile financier claims to be lending money at simple interest, but he includes the interest every six months for calculating the principal. If he is charging an interest of 14%, the effective rate of interest becomes:

- Ans**
- 1. 15%
 - 2. 14.49%
 - 3. 14.35%
 - 4. 15.49%

Question ID : 65497829919
Status : Answered
Chosen Option : 2

Q.3 A calculates his profit percentage on the selling price of an article, whereas B calculates his profit on the cost price of the same article. The selling price of both of them is the same and both get 40% profit. If the difference between their profits is ₹120, then the selling price (in ₹) of the article is:

- Ans**
- 1. 1,120
 - 2. 1,020
 - 3. 1,050
 - 4. 980

Question ID : 65497829932
Status : Not Answered
Chosen Option : -

Q.4 The average of 19 numbers is 24. The average of the first 8 numbers is 26.5 and that of the last 12 numbers is 21.5. If the 8th number is excluded, then what will be the average (correct to one decimal point) of the remaining numbers?

- Ans**
- 1. 24.6
 - 2. 25.2
 - 3. 22.8
 - 4. 23.4

Question ID : 65497829925
Status : Answered
Chosen Option : 3

Q.5 A, B and C are three numbers. A is 48% less than B and C is 20% more than the sum of A and B. By what percentage (correct to one decimal place) is B less than C?

- Ans**
- 1. 48.4%
 - 2. 45.2%
 - 3. 72.8%
 - 4. 82.4%

Question ID : 65497829927
Status : Not Answered
Chosen Option : -

Q.6 Find the value of x in the expression $20\% \text{ of } 80 + 2x = 45\% \text{ of } 30 + 20\% \text{ of } 85$.

- Ans
- ✓ 1. $7\frac{1}{4}$
 - ✗ 2. $7\frac{3}{4}$
 - ✗ 3. $7\frac{1}{2}$
 - ✗ 4. $7\frac{1}{3}$

Question ID : 65497829931
Status : Answered
Chosen Option : 1

Q.7 Two numbers are in the ratio $5 : 9$. If their HCF is 14, then what is their LCM?

- Ans
- ✗ 1. 8820
 - ✗ 2. 196
 - ✗ 3. 56
 - ✓ 4. 630

Question ID : 65497829913
Status : Answered
Chosen Option : 4

Q.8 The four walls of a room with dimensions $12 \text{ m} \times 15 \text{ m} \times 20 \text{ m}$ are to be white washed at the rate of $\text{₹}2/\text{m}^2$. Find the cost.

- Ans
- ✗ 1. ₹2,980
 - ✗ 2. ₹1,340
 - ✗ 3. ₹1,150
 - ✓ 4. ₹2,160

Question ID : 65497829921
Status : Answered
Chosen Option : 4

Q.9 A person lent a certain sum of money at 5% simple interest. If the interest after 6 years is ₹5,600 less than the sum lent, then what is the sum lent?

- Ans
- 1. ₹4,307 $\frac{9}{13}$
 - 2. ₹18,666 $\frac{2}{3}$
 - 3. ₹9,200
 - 4. ₹8,000

Question ID : 65497829916

Status : Answered

Chosen Option : 2

Q.10 The value of $\left(1\frac{1}{9} \times 1\frac{1}{20} \div \frac{21}{38} - \frac{1}{3}\right) \times \frac{3}{8} - \left(\frac{2}{3} \div \frac{3}{4} \text{ of } \frac{5}{9}\right) \div 3\frac{1}{5} + 1\frac{1}{6}$ is:

- Ans
- 1. $1\frac{1}{2}$
 - 2. $1\frac{1}{3}$
 - 3. $1\frac{1}{6}$
 - 4. $1\frac{1}{4}$

Question ID : 65497829933

Status : Answered

Chosen Option : 2

Q.11 Sunderlal distributed his savings of ₹1,62,000 among his wife, 3 sons and a daughter in such a way that his wife gets double of what his daughter gets and his daughter gets double of what each of his sons get. How much will his daughter get?

- Ans
- 1. ₹18,000
 - 2. ₹36,000
 - 3. ₹72,000
 - 4. ₹27,000

Question ID : 65497829915

Status : Answered

Chosen Option : 4

Q.12 A shopkeeper gives 17% discount on the discounted price after giving an initial discount of 12% on the marked price of a refrigerator. If the final sale price is ₹21,912, the marked price (in ₹) is:

- Ans
- 1. 28,250
 - 2. 31,500
 - 3. 30,000
 - 4. 27,000

Question ID : 65497829917
Status : Not Answered
Chosen Option : -

Q.13 The ratio of train and bus fares from A to B is 3 : 5. If the train fare is increased by 15% and bus fare is increased by 10%, then what will be the ratio of the new fares of train and bus?

- Ans
- 1. 69 : 110
 - 2. 70 : 99
 - 3. 67 : 97
 - 4. 77 : 105

Question ID : 65497829922
Status : Answered
Chosen Option : 1

Q.14 The ages of Ramesh and his wife are 40 years and 36 years, respectively. If the average age of their son and 2 daughters is 13 years, then what is the average age of the family?

- Ans
- 1. $20\frac{2}{5}$ years
 - 2. $25\frac{1}{2}$ years
 - 3. 23 years
 - 4. $29\frac{2}{3}$ years

Question ID : 65497829914
Status : Answered
Chosen Option : 3

Q.15 A manufacturer marked an item for ₹1,400 and allowed 25% discount to a retailer, who sold it by earning 12% profit. At what price (in ₹) did the retailer sell the item?

- Ans
- 1. 1,176
 - 2. 1,268
 - 3. 1,200
 - 4. 1,250

Question ID : 65497829936
Status : Answered
Chosen Option : 2

Q.16 The list price of an article is ₹850. It is sold for ₹528.87, after giving three successive discounts of 20%, 15% and $x\%$ on the list price. What is the value of x ?

- Ans**
- 1. 8
 - 2. 9
 - 3. 8.5
 - 4. 9.5

Question ID : 65497829926
Status : Not Answered
Chosen Option : -

Q.17 A boat goes 10 km upstream and 12 km downstream in 4 hours. It can also go $7\frac{1}{2}$ km upstream and 7 km downstream in $2\frac{3}{4}$ hours. What is the speed (in km/h) of the boat when going upstream?

- Ans**
- 1. 7
 - 2. 6
 - 3. 8
 - 4. 4

Question ID : 65497829929
Status : Not Answered
Chosen Option : -

Q.18 The cost of 2 dozen bananas is ₹240 and the cost of 18 lemons is ₹90. Find the ratio of the cost of 1 lemon to that of one banana.

- Ans**
- 1. 1 : 2
 - 2. 2 : 3
 - 3. 3 : 2
 - 4. 2 : 1

Question ID : 65497829920
Status : Answered
Chosen Option : 1

Q.19 If the diameter of a sphere is 56 cm, then what is its surface area? (Take $\pi = \frac{22}{7}$)

- Ans**
- 1. 9856 cm^2
 - 2. 9556 cm^2
 - 3. 9756 cm^2
 - 4. 9806 cm^2

Question ID : 65497829924
Status : Answered
Chosen Option : 1

Q.20 Simplify the following expression.

$$2 \div [(-6) \div 2 \times 3] \times 3 - 1$$

- Ans
- 1. $-1\frac{2}{3}$
 - 2. $-\frac{4}{9}$
 - 3. -4
 - 4. -7

Question ID : 65497829935
Status : Answered
Chosen Option : 1

Q.21 A worker can complete a job in 25 days. If supervisor are 25% more efficient than worker, then how many days will 1 supervisor and 5 workers, working together, take to complete the job?

- Ans
- 1. $3\frac{1}{2}$
 - 2. $4\frac{1}{4}$
 - 3. 4
 - 4. 5

Question ID : 65497829937
Status : Answered
Chosen Option : 3

Q.22 Find the greatest possible length which can be used to measure exactly the lengths 4 m 90 cm, 3 m 85 cm and 12 m 95 cm.

- Ans
- 1. 35 cm
 - 2. 25 cm
 - 3. 20 cm
 - 4. 45 cm

Question ID : 65497829930
Status : Answered
Chosen Option : 1

Q.23 A sum of ₹1,727 is divided into three parts A, B and C so that their amounts after 3, 4 and 5 years, respectively, are equal, the rate of simple interest being 5% per annum. How much is A?

- Ans
- 1. ₹670
 - 2. ₹552
 - 3. ₹575
 - 4. ₹600

Question ID : 65497829923
Status : Answered
Chosen Option : 3

Q.24 The ratio of efficiencies of X and Y for doing a certain work is 5 : 9. Working together, they can complete a work in 15 days. X alone will complete $66\frac{2}{3}\%$ of the same work in:

- Ans**
- 1. 28 days
 - 2. 24 days
 - 3. 35 days
 - 4. 30 days

Question ID : 65497829928
Status : Answered
Chosen Option : 1

Q.25 Train A passes an electric pole in 15 seconds, moving at 60 km/h. It crosses train B moving in the opposite direction at 48 km/h, in 19 seconds. What is the length (in m) of train B?

- Ans**
- 1. 350
 - 2. 280
 - 3. 300
 - 4. 320

Question ID : 65497829934
Status : Answered
Chosen Option : 4

Section : Part D English

Q.1 Select the most appropriate meaning of the given idiom.

Elephant in the room

- Ans**
- 1. An obvious issue left unaddressed due to its sensitivity
 - 2. An extremely fat person sitting all alone in a room
 - 3. A wild untamed animal left to wander astray
 - 4. A pretty affair which is kept a secret

Question ID : 65497829942
Status : Answered
Chosen Option : 4

Q.2 Select the most appropriate meaning of the given idiom.

Hands down

- Ans**
- 1. Without any weapons
 - 2. Easily and without doubt
 - 3. With sufficient strength
 - 4. Very weakly and slowly

Question ID : 65497829947
Status : Answered
Chosen Option : 4

Q.3 Select the option that can be used as a one-word substitute for the given group of words.

Natural skill at doing something

- Ans
- 1. Sense
 - 2. Awareness
 - 3. Knack
 - 4. Passion

Question ID : 65497829952
Status : Answered
Chosen Option : 1

Q.4 Select the option that will improve the underlined part of the given sentence. In case no improvement is needed, select 'No improvement required'.

Try harder, don't give away so easily.

- Ans
- 1. give back
 - 2. give up
 - 3. give out
 - 4. No improvement required

Question ID : 65497829948
Status : Answered
Chosen Option : 2

Q.5 Select the option that can be used as a one-word substitute for the given group of words.

A person who investigates and solves crimes

- Ans
- 1. Invigilator
 - 2. Detective
 - 3. Explorer
 - 4. Inventor

Question ID : 65497829957
Status : Answered
Chosen Option : 2

Q.6 Select the option that will improve the underlined part of the given sentence. In case no improvement is needed, select 'No improvement required'.

It never dawned to him if he could be in danger.

- Ans
- 1. dawned up to him that
 - 2. dawned on him that
 - 3. dawned at him whether
 - 4. No improvement required

Question ID : 65497829955
Status : Not Answered
Chosen Option : -

Q.7 Select the most appropriate option to fill in the blank.

The protesters _____ when the police used tear gas.

- Ans
- 1. regretted
 - 2. waved
 - 3. assembled
 - 4. dispersed

Question ID : 65497829940
Status : Answered
Chosen Option : 4

Q.8 Select the most appropriate option to fill in the blank.

Asha has _____ the house beautifully for the party.

- Ans
- 1. improved
 - 2. decorated
 - 3. planned
 - 4. produced

Question ID : 65497829949
Status : Answered
Chosen Option : 2

Q.9 The following sentence has been split into four segments. Identify the segment that contains a grammatical error.

We have / run out eggs; / could you buy / some more?

- Ans
- 1. could you buy
 - 2. run out eggs
 - 3. some more
 - 4. We have

Question ID : 65497829950
Status : Answered
Chosen Option : 1

Q.10 The following sentence has been split into four segments. Identify the segment that contains a grammatical error.

Their dog is / more better / trained than / our dog.

- Ans
- 1. Their dog is
 - 2. more better
 - 3. our dog
 - 4. trained than

Question ID : 65497829944
Status : Answered
Chosen Option : 2

Q.11 Select the most appropriate ANTONYM of the given word.

Persuade

- Ans 1. Halt
 2. Lead
 3. Coax
 4. Sway

Question ID : 65497829951
Status : Answered
Chosen Option : 1

Q.12 Select the most appropriate SYNONYM of the given word.

Stray

- Ans 1. Casual
 2. Careless
 3. Fickle
 4. Homeless

Question ID : 65497829956
Status : Answered
Chosen Option : 4

Q.13 Select the most appropriate synonym of the given word.

Reliable

- Ans 1. Wealthy
 2. Fortunate
 3. Intelligent
 4. Trusted

Question ID : 65497829945
Status : Answered
Chosen Option : 4

Q.14 Select the most appropriate ANTONYM of the given word.

Monotonous

- Ans 1. Elaborate
 2. Cheerful
 3. Changing
 4. Varied

Question ID : 65497829946
Status : Answered
Chosen Option : 2

Q.15 The following sentence has been split into four segments. Identify the segment that contains a grammatical error.

Ravi told / his friends / that he would / return back soon.

- Ans 1. his friends
 2. return back soon
 3. that he would
 4. Ravi told

Question ID : 65497829954
Status : Answered
Chosen Option : 4

Q.16 Select the most appropriate word for the given group of words.

An imaginary place where everything is perfect

- Ans 1. elysium
 2. utopia
 3. eden
 4. arcadia

Question ID : 65497829943
Status : Answered
Chosen Option : 3

Q.17 Select the INCORRECTLY spelt word.

- Ans 1. Custard
 2. Costudy
 3. Cushion
 4. Curtail

Question ID : 65497829939
Status : Answered
Chosen Option : 2

Q.18 Select the most appropriate option that can substitute the underlined segment in the given sentence. If there is no need to substitute it, select 'No substitution required'.

If he works harder, he got better results.

- Ans 1. was getting
 2. is getting
 3. No substitution required
 4. will get

Question ID : 65497829938
Status : Answered
Chosen Option : 4

Q.19 Select the INCORRECTLY spelt word.

- Ans
- 1. Fasten
 - 2. Plunge
 - 3. Buisness
 - 4. Evolve

Question ID : 65497829953
Status : Answered
Chosen Option : 3

Q.20 Select the most appropriate option to fill in the blank.

The government _____ the contract for 100 low-floor buses to an automobile manufacturer.

- Ans
- 1. rewarded
 - 2. granted
 - 3. gifted
 - 4. awarded

Question ID : 65497829941
Status : Answered
Chosen Option : 2

Comprehension:

In the following passage, some words have been deleted. Read the passage carefully and select the most appropriate option to fill in each blank.

On 14th April 1912, the Titanic received warnings all the day about (1)_____ icebergs. The first message was received at 9 a.m. Similar messages (2)_____. Around 9 p.m., Captain Smith (3)_____ with his second officer, before retiring for the night. They knew that on such a clear, moonless night it would be (4)_____ difficult to spot icebergs. Why did they not change the course of the ship and take the ice-free southern route? It remains one of the (5)_____ mysteries surrounding the Titanic.

SubQuestion No : 21

Q.21 Select the most appropriate option to fill in blank no. 1.

- Ans
- 1. floating
 - 2. stacking
 - 3. sinking
 - 4. soaring

Question ID : 65497829959
Status : Answered
Chosen Option : 1

Comprehension:

In the following passage, some words have been deleted. Read the passage carefully and select the most appropriate option to fill in each blank.

On 14th April 1912, the Titanic received warnings all the day about (1)_____ icebergs. The first message was received at 9 a.m. Similar messages (2)_____. Around 9 p.m., Captain Smith (3)_____ with his second officer, before retiring for the night. They knew that on such a clear, moonless night it would be (4)_____ difficult to spot icebergs. Why did they not change the course of the ship and take the ice-free southern route? It remains one of the (5)_____ mysteries surrounding the Titanic.

SubQuestion No : 22

Q.22 Select the most appropriate option to fill in blank no. 2.

- Ans 1. rejected
 2. adapted
 3. followed
 4. influenced

Question ID : 65497829960

Status : Not Answered

Chosen Option : -

Comprehension:

In the following passage, some words have been deleted. Read the passage carefully and select the most appropriate option to fill in each blank.

On 14th April 1912, the Titanic received warnings all the day about (1)_____ icebergs. The first message was received at 9 a.m. Similar messages (2)_____. Around 9 p.m., Captain Smith (3)_____ with his second officer, before retiring for the night. They knew that on such a clear, moonless night it would be (4)_____ difficult to spot icebergs. Why did they not change the course of the ship and take the ice-free southern route? It remains one of the (5)_____ mysteries surrounding the Titanic.

SubQuestion No : 23

Q.23 Select the most appropriate option to fill in blank no. 3.

- Ans 1. emigrated
 2. conferred
 3. gimmicked
 4. disunited

Question ID : 65497829961

Status : Answered

Chosen Option : 2

Comprehension:

In the following passage, some words have been deleted. Read the passage carefully and select the most appropriate option to fill in each blank.

On 14th April 1912, the Titanic received warnings all the day about (1)_____ icebergs. The first message was received at 9 a.m. Similar messages (2)_____. Around 9 p.m., Captain Smith (3)_____ with his second officer, before retiring for the night. They knew that on such a clear, moonless night it would be (4)_____ difficult to spot icebergs. Why did they not change the course of the ship and take the ice-free southern route? It remains one of the (5)_____ mysteries surrounding the Titanic.

SubQuestion No : 24

Q.24 Select the most appropriate option to fill in blank no. 4.

- Ans 1. obviously
 2. extremely
 3. dangerously
 4. automatically

Question ID : 65497829962
Status : Answered
Chosen Option : 2

Comprehension:

In the following passage, some words have been deleted. Read the passage carefully and select the most appropriate option to fill in each blank.

On 14th April 1912, the Titanic received warnings all the day about (1)_____ icebergs. The first message was received at 9 a.m. Similar messages (2)_____. Around 9 p.m., Captain Smith (3)_____ with his second officer, before retiring for the night. They knew that on such a clear, moonless night it would be (4)_____ difficult to spot icebergs. Why did they not change the course of the ship and take the ice-free southern route? It remains one of the (5)_____ mysteries surrounding the Titanic.

SubQuestion No : 25

Q.25 Select the most appropriate option to fill in blank no. 5.

- Ans 1. dishelmed
 2. declaimed
 3. resolved
 4. unsolved

Question ID : 65497829963
Status : Answered
Chosen Option : 4

Section : Part D Hindi

Q.1 सही वर्तनी वाले शब्द का चयन कीजिए।

- Ans 1. परस्परीक
 2. पारस्परीक
 3. पारस्परिक
 4. परस्परिक

Question ID : 65497829965
Status : Not Answered
Chosen Option : -

Q.2 'संकीर्ण' का विलोम शब्द होगा-

- Ans 1. विस्तीर्ण
 2. उत्तीर्ण
 3. प्रकीर्ण
 4. संकुचित

Question ID : 65497829979
Status : Not Answered
Chosen Option : -

Q.3 'मनोरथ' किसका पर्यायवाची है?

- Ans 1. लालच
 2. लक्ष्य
 3. वासना
 4. कामना

Question ID : 65497829978
Status : Not Answered
Chosen Option : -

Q.4 दिये गये वाक्य के किस भाग में त्रुटि है?

इस प्रकरण में उसके साथ उचित न्याय किया जाएगा।

- Ans 1. उचित न्याय
 2. उसके साथ
 3. इस प्रकरण में
 4. किया जाएगा।

Question ID : 65497829981
Status : Not Answered
Chosen Option : -

Q.5 'इतिहास का जानकार' वाक्यांश के लिए एक शब्द होगा-

- Ans 1. इतिहासज्ञ
 2. ऐतिहासिक
 3. पुरातात्विक
 4. प्रागैतिहासिक

Question ID : 65497829976
Status : Not Answered
Chosen Option : -

Q.6 'हवा से बार्ते करना' मुहावरे का अर्थ बताइए।

- Ans
- 1. पक्षियों की भाषा समझना
 - 2. अकेले रहना
 - 3. ऊँचा उड़ना
 - 4. तेज़ गति से चलना

Question ID : 65497829967
Status : Not Answered
Chosen Option : -

Q.7 दिए गए शब्द के समानार्थी शब्द का चयन करें।

सोना

- Ans
- 1. रत्नाकर
 - 2. हिरण्य
 - 3. कलत्र
 - 4. ललाम

Question ID : 65497829971
Status : Not Answered
Chosen Option : -

Q.8 दिये गये वाक्य में रेखांकित अंश को प्रतिस्थापित करने के लिए सबसे उपयुक्त विकल्प का चयन करें।

मैं दो घंटे से आपकी प्रतीक्षा देख रहा हूँ।

- Ans
- 1. कर रहा हूँ।
 - 2. खा रहा हूँ।
 - 3. सुन रहा हूँ।
 - 4. गुन रहा हूँ।

Question ID : 65497829974
Status : Not Answered
Chosen Option : -

Q.9 दिये गये वाक्य के किस भाग में त्रुटि है?

अगामी सोमवार से परीक्षा शुरू होगी।

- Ans
- 1. सोमवार से
 - 2. शुरू होगी।
 - 3. अगामी
 - 4. परीक्षा

Question ID : 65497829977
Status : Not Answered
Chosen Option : -

Q.10 खूब लड़ी मदर्नी वो तो _____ थी।

रिक्त स्थान की पूर्ति कीजिए।

- Ans
- 1. रानी पद्मावती
 - 2. अनसूया
 - 3. अहल्या
 - 4. झाँसी वाली रानी

Question ID : 65497829975
Status : Not Answered
Chosen Option : -

Q.11 सही वर्तनी वाले शब्द का चयन कीजिए।

- Ans
- 1. शष्ठ
 - 2. षष्ठ
 - 3. षष्ट
 - 4. शष्ट

Question ID : 65497829964
Status : Not Answered
Chosen Option : -

Q.12 'पौ बारह होना' मुहावरे का सही अर्थ क्या है?

- Ans
- 1. खूब लाभ होना
 - 2. बहुत नुकसान होना
 - 3. घमंड करना
 - 4. आश्चर्यचकित होना

Question ID : 65497829980
Status : Not Answered
Chosen Option : -

Q.13 दिए गए वाक्य में रेखांकित खंड को प्रतिस्थापित करने के लिए सबसे उपयुक्त विकल्प का चयन करें। यदि इसे प्रतिस्थापित करने की आवश्यकता नहीं है, तो विकल्प 'किसी बदलाव की आवश्यकता नहीं है' का चयन करें।

मैं निश्चय रूप से नहीं कह सकता कि वह कब आएगा।

- Ans
- 1. किसी बदलाव की आवश्यकता नहीं है।
 - 2. निश्चय स्वरूप से नहीं कह सकता
 - 3. निश्चित रूप से नहीं कह सकता
 - 4. निश्चित रूप में नहीं कह सकता

Question ID : 65497829972
Status : Not Answered
Chosen Option : -

Q.14 दिये गये वाक्यांश के लिए एक शब्द दीजिये।

मृग जैसी आँखों वाली स्त्री

- Ans 1. मृगनयनी
 2. हिरनचक्षु
 3. मृगया
 4. मृगमुखी

Question ID : 65497829969
Status : Not Answered
Chosen Option : -

Q.15 रिक्त स्थान को भरने के लिए सबसे उपयुक्त शब्द का चयन करें।

मनोरंजन भी जीवन के लिए उतना ही _____ है, जितना अध्ययन।

- Ans 1. प्रतिबंधित
 2. शानदार
 3. आवश्यक
 4. अनावश्यक

Question ID : 65497829968
Status : Not Answered
Chosen Option : -

Q.16 दिए गए वाक्य में रेखांकित खंड को प्रतिस्थापित करने के लिए सबसे उपयुक्त विकल्प का चयन करें। यदि इसे प्रतिस्थापित करने की आवश्यकता नहीं है, तो विकल्प 'किसी बदलाव की आवश्यकता नहीं है' का चयन करें।

अपने परिवार की गरिमा का ध्यान रखना।

- Ans 1. गरिमा का ध्यान रखना।
 2. गरीमा का ध्यान रखना।
 3. गरीमा का ध्यान रखना।
 4. किसी बदलाव की आवश्यकता नहीं है।

Question ID : 65497829966
Status : Not Answered
Chosen Option : -

Q.17 'रिक्त' का विलोम शब्द होगा-

- Ans 1. अधूरा
 2. अतिरिक्त
 3. पूर्ण
 4. अपूर्ण

Question ID : 65497829982
Status : Not Answered
Chosen Option : -

Q.18 दिए गए वाक्य का वह भाग ज्ञात करें जिसमें कोई त्रुटि है। यदि कोई त्रुटि नहीं है, तो 'कोई त्रुटि नहीं है' चुनें।

वैसा ही (1)/ उच्चारण हमें हिन्दी (2)/ में भी करनी चाहिए (3)/ कोई त्रुटि नहीं है (4)

- Ans
- 1. 1
 - 2. 3
 - 3. 2
 - 4. 4

Question ID : 65497829970
Status : Not Answered
Chosen Option : -

Q.19 नीचे दिए वाक्य में रिक्त-स्थान भरने के लिए सबसे उपयुक्त शब्द का चयन करें।

मुर्गा सुबह-सुबह _____ देता है।

- Ans
- 1. कूकड़ूँ
 - 2. दहाड़
 - 3. बाँग
 - 4. टर्

Question ID : 65497829973
Status : Not Answered
Chosen Option : -

Q.20 'जो केंद्र की ओर उन्मुख होता हो' वाक्यांश के लिए एक शब्द होगा-

- Ans
- 1. केन्द्रापसारी
 - 2. विकेन्द्रीय
 - 3. केन्द्रीय
 - 4. केन्द्राभिसारी

Question ID : 65497829983
Status : Not Answered
Chosen Option : -

Comprehension:

जैसे ज्ञान का संशोधन और परिष्कार विज्ञान के (1)_____ द्वारा होता है, उसी प्रकार मनुष्य के स्वभाव का (2)_____ कलाओं के द्वारा किया जाता है। केवल ज्ञान की उन्नति और परिष्कार को अपना ध्येय बना लेने के कारण मनुष्य की (3)_____ शक्तियां बढ़ तो बहुत गयी हैं, लेकिन कलाओं की (4)_____ कर देने से हमें उनकी केवल दाहकता ही नसीब हो रही है। कलाहीनता मनुष्य को जड़ बना देती है और सचमुच ही आज का मनुष्य चारों ओर से अपनी ही (5)_____ का शिकार हो रहा है।

उपरोक्त गद्यांश के आधार पर निम्न प्रश्नों के उत्तर दीजिए।

SubQuestion No : 21

Q.21 गद्यांश के रिक्त स्थान (1) के लिए सर्वाधिक उपयुक्त शब्द होगा-

- Ans 1. उपकरणों
 2. प्रयोगों
 3. यंत्रों
 4. उद्योगों

Question ID : 65497829985

Status : Not Answered

Chosen Option : -

Comprehension:

जैसे ज्ञान का संशोधन और परिष्कार विज्ञान के (1)_____ द्वारा होता है, उसी प्रकार मनुष्य के स्वभाव का (2)_____ कलाओं के द्वारा किया जाता है। केवल ज्ञान की उन्नति और परिष्कार को अपना ध्येय बना लेने के कारण मनुष्य की (3)_____ शक्तियां बढ़ तो बहुत गयी हैं, लेकिन कलाओं की (4)_____ कर देने से हमें उनकी केवल दाहकता ही नसीब हो रही है। कलाहीनता मनुष्य को जड़ बना देती है और सचमुच ही आज का मनुष्य चारों ओर से अपनी ही (5)_____ का शिकार हो रहा है।

उपरोक्त गद्यांश के आधार पर निम्न प्रश्नों के उत्तर दीजिए।

SubQuestion No : 22

Q.22 गद्यांश के रिक्त स्थान (2) के लिए सर्वाधिक उपयुक्त शब्द होगा-

- Ans 1. विकास
 2. हास
 3. परिष्कार
 4. उत्थान

Question ID : 65497829986

Status : Not Answered

Chosen Option : -

Comprehension:

जैसे ज्ञान का संशोधन और परिष्कार विज्ञान के (1)_____ द्वारा होता है, उसी प्रकार मनुष्य के स्वभाव का (2)_____ कलाओं के द्वारा किया जाता है। केवल ज्ञान की उन्नति और परिष्कार को अपना ध्येय बना लेने के कारण मनुष्य की (3)_____ शक्तियां बढ़ तो बहुत गयी हैं, लेकिन कलाओं की (4)_____ कर देने से हमें उनकी केवल दाहकता ही नसीब हो रही है। कलाहीनता मनुष्य को जड़ बना देती है और सचमुच ही आज का मनुष्य चारों ओर से अपनी ही (5)_____ का शिकार हो रहा है।

उपरोक्त गद्यांश के आधार पर निम्न प्रश्नों के उत्तर दीजिए।

SubQuestion No : 23

Q.23 गद्यांश के रिक्त स्थान (3) के लिए सर्वाधिक उपयुक्त शब्द होगा-

- Ans 1. मानसिक
 2. सामाजिक
 3. आर्थिक
 4. शारीरिक

Question ID : 65497829987

Status : Not Answered

Chosen Option : -

Comprehension:

जैसे ज्ञान का संशोधन और परिष्कार विज्ञान के (1)_____ द्वारा होता है, उसी प्रकार मनुष्य के स्वभाव का (2)_____ कलाओं के द्वारा किया जाता है। केवल ज्ञान की उन्नति और परिष्कार को अपना ध्येय बना लेने के कारण मनुष्य की (3)_____ शक्तियां बढ़ तो बहुत गयी हैं, लेकिन कलाओं की (4)_____ कर देने से हमें उनकी केवल दाहकता ही नसीब हो रही है। कलाहीनता मनुष्य को जड़ बना देती है और सचमुच ही आज का मनुष्य चारों ओर से अपनी ही (5)_____ का शिकार हो रहा है।

उपरोक्त गद्यांश के आधार पर निम्न प्रश्नों के उत्तर दीजिए।

SubQuestion No : 24

Q.24 गद्यांश के रिक्त स्थान (4) के लिए सर्वाधिक उपयुक्त शब्द होगा-

- Ans 1. अपेक्षा
 2. प्रशंसा
 3. उपेक्षा
 4. तुलना

Question ID : 65497829988

Status : Not Answered

Chosen Option : -

Comprehension:

जैसे ज्ञान का संशोधन और परिष्कार विज्ञान के (1)_____ द्वारा होता है, उसी प्रकार मनुष्य के स्वभाव का (2)_____ कलाओं के द्वारा किया जाता है। केवल ज्ञान की उन्नति और परिष्कार को अपना ध्येय बना लेने के कारण मनुष्य की (3)_____ शक्तियाँ बढ़ तो बहुत गयी हैं, लेकिन कलाओं की (4)_____ कर देने से हमें उनकी केवल दाहकता ही नसीब हो रही है। कलाहीनता मनुष्य को जड़ बना देती है और सचमुच ही आज का मनुष्य चारों ओर से अपनी ही (5)_____ का शिकार हो रहा है।

उपरोक्त गद्यांश के आधार पर निम्न प्रश्नों के उत्तर दीजिए।

SubQuestion No : 25

Q.25 गद्यांश के रिक्त स्थान (5) के लिए सर्वाधिक उपयुक्त शब्द होगा-

- Ans
- 1. शिथिलता
 - 2. निष्क्रियता
 - 3. सक्रियता
 - 4. जड़ता

Question ID : 65497829989

Status : Not Answered

Chosen Option : -

**SSC
GD**

**Previous Year Paper
24 Nov 2021 Shift 2**

Exam Date	24/11/2021
Exam Time :	12:30 PM - 2:00 PM
Subject	Constable GD 2021

Section : Part A General Intelligence and Reasoning

Q.1 Mira is the wife of Ketan. Chaitanya is the brother of Kapila, who is the wife of Sudeep. Rani is the mother of Ketan and the wife of Surendra. Chaitanya is the son of Rani. How is Surendra related to Sudeep?

- Ans
- 1. Son
 - 2. Brother
 - 3. Father
 - 4. Father-in-law

Question ID : 65497834194
Status : Answered
Chosen Option : 4

Q.2 Read the given statements and conclusions carefully. Assuming that the information given in the statements is true, even if it appears to be at variance with commonly known facts, decide which of the given conclusions logically follow(s) from the statements.

Statements:

1. Some medicines are injections.
2. No injection is an equipment.

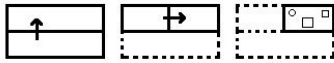
Conclusions:

- I. No equipment is an injection.
- II. No medicine is an equipment.

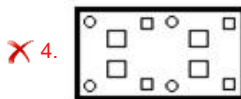
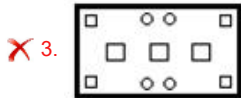
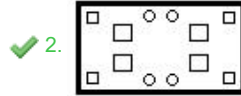
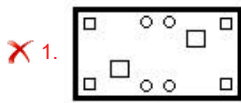
- Ans
- 1. Only conclusion II follows
 - 2. Only conclusion I follows
 - 3. None of the conclusions follow
 - 4. Both the conclusions follow

Question ID : 65497834186
Status : Answered
Chosen Option : 2

Q.3 The sequence of folding a piece of paper and the manner in which the folded paper has been cut is shown in the following figures. How would this paper look when unfolded?

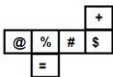


Ans



Question ID : 65497834189
 Status : Answered
 Chosen Option : 2

Q.4 A cube is made by folding the given sheet. In the cube so formed, what would be the symbol on the opposite side of the symbol '+'?



- Ans
- 1. %
 - 2. @
 - 3. =
 - 4. #

Question ID : 65497834204
 Status : Answered
 Chosen Option : 3

Q.5 Select the number from among the given options that can replace the question mark (?) in the following series.

1, 2, 2, 4, 8, 32, ?

- Ans
- 1. 64
 - 2. 40
 - 3. 16
 - 4. 256

Question ID : 65497834199
 Status : Answered
 Chosen Option : 4

Q.6 Select the number from among the given options that can replace the question mark (?) in the following series.

40, 76, 44, 70, 49, 64, 55, 58, ?

Ans 1. 62

2. 80

3. 65

4. 71

Question ID : 65497834195

Status : Answered

Chosen Option : 1

Q.7 Select the letter from among the given options that can replace the question mark (?) in the following series.

G, K, O, S, W, A, ?

Ans 1. J

2. E

3. G

4. C

Question ID : 65497834181

Status : Answered

Chosen Option : 2

Q.8 In a certain code language, 'LEJ' is written as 'XJT' and 'FAME' is written as 'LBZJ'. How will 'CABLE' be written in that language?

Ans 1. HBDZJ

2. FBDXJ

3. DBCXF

4. XZYOJ

Question ID : 65497834192

Status : Answered

Chosen Option : 2

Q.9 Six persons, P, Q, R, S, T and U, are watching a movie sitting in a line, all facing the north. S is sitting between P and Q. T is at second place to the left of P. R is third to the left of Q. Q is sitting at one of the corners. Who is sitting at the other corner?

Ans 1. S

2. R

3. T

4. U

Question ID : 65497834183

Status : Answered

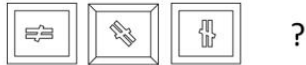
Chosen Option : 4

Q.10 'Majority' is related to 'Minority' in the same way as 'Natural' is related to '_____'.
Ans

- 1. Nature
- 2. Fragrance
- 3. Artificial
- 4. Environment

Question ID : 65497834182
Status : Answered
Chosen Option : 3

Q.11 Select the figure from among the given options that can replace the question mark (?) in the following series.



Ans

- 1.
- 2.
- 3.
- 4.

Question ID : 65497834200
Status : Answered
Chosen Option : 3

Q.12 Select the option in which the numbers are related in the same way as are the numbers in the given set.

(9, 79, 7)

- Ans
- 1. (15, 239, 14)
 - 2. (24, 635, 25)
 - 3. (20, 800, 40)
 - 4. (12, 135, 18)

Question ID : 65497834187
Status : Answered
Chosen Option : 4

Q.13 Which two signs should be interchanged to make the given equation correct?

$$12 - 14 \times 21 \div 7 + 28 = 193$$

- Ans
- 1. \times and $-$
 - 2. $+$ and \times
 - 3. $+$ and \div
 - 4. \times and \div

Question ID : 65497834203
Status : Answered

Q.14 Select the combination of letters that when sequentially placed in the blanks of the given series will complete the series.

L _ _ R _ T _ M P _ S _ _ M P _ S T

- Ans 1. M, P, S, L, R, T, L, R
 2. L, R, T, S, P, P, S, T
 3. L, M, R, S, L, M, P, R
 4. R, P, L, M, S, L, S, T

Question ID : 65497834198
Status : Answered
Chosen Option : 1

Q.15 Select the option that is related to the fourth number in the same way as the first number is related to the second number and the fifth number is related to the sixth number.

345 : 7 :: ? : 9 :: 66 : 4

- Ans 1. 514
 2. 731
 3. 445
 4. 651

Question ID : 65497834202
Status : Answered
Chosen Option : 2

Q.16 Select the correct mirror image of the given combination when the mirror is placed at the right side.

G N 2 1 q K

- Ans 1. K p 1 2 1 G N 2
 2. K p 1 2 1 G N 2
 3. K p 1 2 1 G N 2
 4. K p 1 2 1 G N 2

Question ID : 65497834196
Status : Answered
Chosen Option : 4

Q.17 Four letter-clusters have been given, out of which three are alike in some manner and one is different. Select the letter-cluster that is different.

- Ans 1. HLM
 2. KOP
 3. PRT
 4. DHI

Question ID : 65497834190
Status : Answered
Chosen Option : 3

Q.18 P, Q, R, S, T, U, V and W are sitting anticlockwise around a circular table in the same sequence at equal distances between them. All are facing the centre of the table. S is facing the south. Then V and Q interchange their positions. In which direction is Q sitting now?

- Ans
- 1. South-east
 - 2. North-east
 - 3. South-west
 - 4. North

Question ID : 65497834201
Status : Answered
Chosen Option : 2

Q.19 An amount of ₹1,189 is to be divided among Rakesh, Mrinal and Sanjay in the ratio of 11 : 13 : 17, respectively. How much amount will Sanjay get more than Rakesh?

- Ans
- 1. ₹160
 - 2. ₹222
 - 3. ₹194
 - 4. ₹174

Question ID : 65497834188
Status : Answered
Chosen Option : 4

Q.20 In a certain code language, 'SOIL' is coded as '38301824'. How will 'DECIMAL' be coded in that language?

- Ans
- 1. 81061826224
 - 2. 41060928224
 - 3. 85161626224
 - 4. 81062028226

Question ID : 65497834193
Status : Answered
Chosen Option : 1

Q.21 Select the option that is related to the third term in the same way as the second term is related to the first term.

ORATOR : RQDSRQ :: TACKLE : ?

- Ans
- 1. WYFMOG
 - 2. WZFJOD
 - 3. VYFJPQ
 - 4. WZFLOF

Question ID : 65497834191
Status : Answered
Chosen Option : 2

Q.22 In a certain code language, 'MANGOES' is written as 'AEGMNOS'. How will 'FRIEND' be written in that language?

- Ans 1. DEFINR
 2. RDHFNI
 3. RFEIDN
 4. UIRVMW

Question ID : 65497834185
Status : Answered
Chosen Option : 1

Q.23 Select the option in which the given figure is embedded (rotation is NOT allowed).



Ans

- 1.
- 2.
- 3.
- 4.

Question ID : 65497834205
Status : Answered
Chosen Option : 2

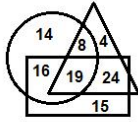
Q.24 Select the correct option that indicates the arrangement of the given words in the order in which they appear in an English dictionary.

1. Pegmatites
2. Persistence
3. Peroration
4. Percodan
5. Perfection

- Ans 1. 1, 3, 2, 4, 5
 2. 1, 4, 5, 2, 3
 3. 1, 4, 5, 3, 2
 4. 1, 3, 4, 5, 2

Question ID : 65497834197
Status : Answered
Chosen Option : 3

Q.25 In the following diagram, the circle stands for 'teachers', the rectangle stands for 'part-time workers', and the triangle stands for 'online educators'. The numbers given in the different segments represent the number of persons of that category.



How many teachers are online educators and also part-time workers?

- Ans
- 1. 24
 - 2. 19
 - 3. 15
 - 4. 16

Question ID : 65497834184
Status : Answered
Chosen Option : 2

Section : Part B General Knowledge and General Awareness

Q.1 A 'duopoly' is a type of oligopoly wherein _____ firms have dominant or exclusive control over a market.

- Ans
- 1. two
 - 2. five
 - 3. four
 - 4. three

Question ID : 65497834223
Status : Answered
Chosen Option : 1

Q.2 Who among the following had laid the foundation of Lodi dynasty?

- Ans
- 1. Ibrahim Lodi
 - 2. Bahlul Lodi
 - 3. Sikandar Lodi
 - 4. Jalaluddin Lodi

Question ID : 65497834215
Status : Answered
Chosen Option : 3

Q.3 Which team became the first IPL team to win the IPL title for the fifth time in 2020?

- Ans
- 1. Delhi Capitals
 - 2. Chennai Super Kings
 - 3. Royal Challengers Bangalore
 - 4. Mumbai Indians

Question ID : 65497834208
Status : Answered
Chosen Option : 4

Q.4 According to Census 2011, which is the least populous state in India?

- Ans 1. Arunachal Pradesh
 2. S kkim
 3. Mizoram
 4. Goa

Question ID : 65497834213
Status : Answered
Chosen Option : 2

Q.5 Which of the following statements is CORRECT?

- Ans 1. The sun is an example of an illuminated object.
 2. A frying pan is an example of an opaque object.
 3. A wooden box is an example of a luminous object.
 4. An empty bottle made of clear glass is an example of a translucent object.

Question ID : 65497834228
Status : Answered
Chosen Option : 4

Q.6 Which neighbouring country and India's boundary was ratified by The Constitution (100th Amendment) Act, 2015?

- Ans 1. Bhutan
 2. Myanmar
 3. Bangladesh
 4. Nepal

Question ID : 65497834207
Status : Answered
Chosen Option : 2

Q.7 Which clause allows the government to breach its fiscal deficit target by 0.5% points at times of severe stress in the economy?

- Ans 1. FAR clause
 2. Guarantee clause
 3. DEAR clause
 4. Escape clause

Question ID : 65497834210
Status : Answered
Chosen Option : 4

Q.8 Annie Zaidi was awarded the Nine Dots Prize for the year _____.

- Ans 1. 2020-21
 2. 2021-22
 3. 2019-20
 4. 2018-19

Question ID : 65497834230
Status : Not Answered
Chosen Option : --

Q.9 Which of the following states is the 'Vinchhudo' dance primarily associated with?

- Ans
- 1. Nagaland
 - 2. Madhya Pradesh
 - 3. Gujarat
 - 4. Goa

Question ID : 65497834227
Status : Not Answered
Chosen Option : --

Q.10 The natural tendency of objects to resist a change in their state of rest or of uniform motion is known as _____.

- Ans
- 1. momentum
 - 2. acceleration
 - 3. force
 - 4. inertia

Question ID : 65497834224
Status : Answered
Chosen Option : 4

Q.11 When government is lowering taxes and raising government spending, which kind of fiscal policy is it following?

- Ans
- 1. Neutral Fiscal Policy
 - 2. Contractional Fiscal Policy
 - 3. Both, Contractional Fiscal Policy and Expansionary Fiscal Policy
 - 4. Expansionary Fiscal Policy

Question ID : 65497834206
Status : Answered
Chosen Option : 2

Q.12 Kamala Harris, the first female Vice-President of the US, has family roots in the Indian state of:

- Ans
- 1. Karnataka
 - 2. Kerala
 - 3. Andhra Pradesh
 - 4. Tamil Nadu

Question ID : 65497834219
Status : Answered
Chosen Option : 1

Q.13 In which Indian city is one of the country's ancient lakes, the 'Lendiya Talab' located?

- Ans
- 1. Chennai
 - 2. Bhopal
 - 3. Lucknow
 - 4. Varanasi

Question ID : 65497834209
Status : Not Answered
Chosen Option : --

Q.14 Who among the following players won the Women's Singles event at the French Open 2020?

- Ans
- 1. Katie Boulter
 - 2. Elina Svitolina
 - 3. Iga Swiatek
 - 4. Sofia Kenin

Question ID : 65497834222
Status : Answered
Chosen Option : 3

Q.15 Which of the following conspiracies was linked to the train robbery in 1925?

- Ans
- 1. Kakori Conspiracy
 - 2. Delhi Conspiracy
 - 3. Peshawar Conspiracy
 - 4. Muzaffarpur Conspiracy

Question ID : 65497834225
Status : Answered
Chosen Option : 1

Q.16 The Fundamental Principles of the Olympic Charter are based on a document written by:

- Ans
- 1. Leo Tolstoy
 - 2. Aristotle
 - 3. Muhammad Ali
 - 4. Pierre de Coubertin

Question ID : 65497834218
Status : Answered
Chosen Option : 4

Q.17 Deepa Malik is India's first female para-athlete to win a medal at the _____ Rio Paralympics.

- Ans
- 1. 2014
 - 2. 2018
 - 3. 2016
 - 4. 2015

Question ID : 65497834220
Status : Answered
Chosen Option : 3

Q.18 In which year did Subhash Chandra Bose escape from under British surveillance?

- Ans
- 1. 1941
 - 2. 1939
 - 3. 1932
 - 4. 1945

Question ID : 65497834211
Status : Answered
Chosen Option : 1

Q.19 Which is the first month of the Indian national calendar year beginning on 22 March, which is the day after the spring equinox?

- Ans
- 1. Ashwin
 - 2. Kartika
 - 3. Phalguna
 - 4. Chaitra

Question ID : 65497834212
Status : Answered
Chosen Option : 1

Q.20 Which of the following is a chemical element with the atomic number 10?

- Ans
- 1. Helium
 - 2. Neon
 - 3. Lithium
 - 4. Carbon

Question ID : 65497834229
Status : Answered
Chosen Option : 2

Q.21 With reference to the ancient history of India, which of the following sites is associated with the Ashoka Pillar?

- Ans
- 1. Sanchi
 - 2. Khajuraho
 - 3. Chatru
 - 4. Mandu

Question ID : 65497834214
Status : Not Answered
Chosen Option : --

Q.22 Rechna Doab is located between:

- Ans
- 1. Ganga and Ghaghara rivers
 - 2. Ravi and Chenab rivers
 - 3. Beas and Sutlej rivers
 - 4. Indus and Jhelum rivers

Question ID : 65497834221
Status : Not Answered
Chosen Option : --

Q.23 With reference to the constitutional provisions regarding Rajya Sabha, which of the following statements is correct?

- Ans
- 1. The Vice-president of India is ex officio Chairman of the Rajya Sabha.
 - 2. The Attorney-General of India is ex officio Chairman of the Rajya Sabha.
 - 3. The President of India is ex officio Chairman of the Rajya Sabha.
 - 4. The Prime Minister of India is ex officio Chairman of the Rajya Sabha.

Question ID : 65497834217
Status : Answered
Chosen Option : 1

Q.24 When was the Fit India movement launched to encourage Indians to include fitness activities and sports in their daily lives to pave the way for a healthy and fit lifestyle?

- Ans
- 1. June 2019
 - 2. July 2019
 - 3. September 2019
 - 4. August 2019

Question ID : 65497834226
Status : Answered
Chosen Option : 4

Q.25 Who among the following took oath as Lieutenant Governor of Jammu and Kashmir in August 2020?

- Ans
- 1. Farooq Khan
 - 2. Satya Pal Mal k
 - 3. Girish Chandra Murmu
 - 4. Manoj Sinha

Question ID : 65497834216
Status : Answered
Chosen Option : 3

Section : Part C Elementary Mathematics

Q.1 In a toy factory, a worker can assemble a toy in 5 minutes. If, from 10:30 a.m. to 12:30 p.m., 1248 toys are to be assembled, then how many workers should be employed?

- Ans
- 1. 52
 - 2. 50
 - 3. 78
 - 4. 26

Question ID : 65497834243
Status : Answered
Chosen Option : 1

Q.2 A dealer sold an article at a loss of 8%. Had he sold it for ₹72 more, he would have gained 16%. The cost price of the article was:

- Ans
- 1. ₹350
 - 2. ₹300
 - 3. ₹450
 - 4. ₹400

Question ID : 65497834244
Status : Answered
Chosen Option : 2

Q.3 If the simple interest on a certain sum of money for 15 months at 9.6% per annum exceeds the simple interest on the same sum for 8 months at 11.4% by ₹1,320, then the sum is:

- Ans** 1. ₹30,000
 2. ₹32,000
 3. ₹28,000
 4. ₹25,000

Question ID : 65497834245
Status : Answered
Chosen Option : 4

Q.4 Two students A and B appeared in a class test. B scored 40% of the sum total of their marks, which is 7 less than the marks of A. How many marks did B score?

- Ans** 1. 5
 2. 14
 3. 12
 4. 21

Question ID : 65497834233
Status : Answered
Chosen Option : 2

Q.5 The LCM and HCF of two numbers are 25 and 150, respectively. If one of the numbers is 50, then what is the sum of the two numbers?

- Ans** 1. 100
 2. 175
 3. 75
 4. 125

Question ID : 65497834238
Status : Answered
Chosen Option : 4

Q.6 A shopkeeper buys a computer table for ₹5,500. What should be the marked price of the computer table such that even after allowing a 10% discount, he gains ₹1,070?

- Ans** 1. ₹6,050
 2. ₹7,227
 3. ₹7,300
 4. ₹6,570

Question ID : 65497834241
Status : Answered
Chosen Option : 3

Q.7 Two solutions A and B of acid and water contain acid and water in the ratio 7 : 9 and 5 : 3, respectively. A and B are mixed in the ratio $x : y$. If the ratio of acid and water in the resulting solution is 9 : 7, then $x : y$ is:

- Ans**
- 1. 4 : 5
 - 2. 2 : 3
 - 3. 1 : 2
 - 4. 3 : 4

Question ID : 65497834254
Status : Answered
Chosen Option : 3

Q.8 The price of a commodity has increased by 20%. The Gupta family reframed their monthly budget and plans to spend 8% more money on that particular commodity. By what percentage should they reduce its consumption so as to manage with the increased amount of money?

- Ans**
- 1. 12
 - 2. 8
 - 3. 14
 - 4. 10

Question ID : 65497834239
Status : Answered
Chosen Option : 4

Q.9 A student, walking at a speed of 5 km/h, took 50 minutes, but reached the school 10 minutes later than the scheduled time. To reach school on time, the speed of the student should be:

- Ans**
- 1. 6.5 km/h
 - 2. $\frac{25}{6}$ km/h
 - 3. 6 km/h
 - 4. $\frac{25}{4}$ km/h

Question ID : 65497834250
Status : Answered
Chosen Option : 4

Q.10 If 62% of a number is equal to three-fifth of another number, then what is the ratio of the first number to the second number?

- Ans**
- 1. 30 : 31
 - 2. 31 : 30
 - 3. 31 : 20
 - 4. 20 : 31

Question ID : 65497834236
Status : Answered
Chosen Option : 1

Q.11 Four years ago, the average age of 45 employees in an office was 32 years. During this period 3 more persons joined the company and at present the average age of the company's employees is 37 years. What is the average age of the 3 new employees?

- Ans**
- 1. 54 years 3 months
 - 2. 52 years
 - 3. 51 years
 - 4. 58 years

Question ID : **65497834231**
Status : **Answered**
Chosen Option : **2**

Q.12 The average of four 3-digit numbers $34x$, 197 , $6x4$ and 348 is 386 . What is the average of $(3x + 1)$ and $(7x - 2)$?

- Ans**
- 1. 26
 - 2. 23
 - 3. 24.5
 - 4. 25.5

Question ID : **65497834253**
Status : **Answered**
Chosen Option : **3**

Q.13 A motorist travels a certain distance at an average speed of 48 km/h and returns at an average speed of 32 km/h. What is the average speed (in km/h) for the whole journey?

- Ans**
- 1. 38
 - 2. 38.4
 - 3. 39.8
 - 4. 40

Question ID : **65497834235**
Status : **Answered**
Chosen Option : **2**

Q.14 Simplify the following expression.

$$7 + 35 \div 7 \times 5 \text{ of } 6 - 1$$

- Ans**
- 1. 156
 - 2. 132
 - 3. 12
 - 4. 179

Question ID : **65497834240**
Status : **Answered**
Chosen Option : **1**

Q.15 If the ratio of the base radii of a cylinder and a cone is 1 : 2 and that of their heights is 2 : 1, then what is the ratio of the volume of the cylinder to that of the cone?

- Ans**
- 1. 2 : 3
 - 2. 1 : 1
 - 3. 2 : 1
 - 4. 3 : 2

Question ID : 65497834237
Status : Answered
Chosen Option : 4

Q.16 The LCM of two numbers is 45 times their HCF, and the sum of the LCM and HCF is 1518. If one of the numbers is divided by 16, the quotient is 18 and the remainder is 9. What is the other number?

- Ans**
- 1. 495
 - 2. 363
 - 3. 330
 - 4. 165

Question ID : 65497834252
Status : Answered
Chosen Option : 4

Q.17 $2 + 3 \div 2 \text{ of } \frac{3}{2} + 2 \left(4 \times 2 \div 2 \text{ of } \frac{1}{2} + 2 - \frac{1}{2} \right)$, after simplification, will give the result as:

- Ans**
- 1. $\frac{7}{2}$
 - 2. 21
 - 3. 19
 - 4. 22

Question ID : 65497834247
Status : Answered
Chosen Option : 2

Q.18 A shopkeeper buys a gadget for ₹1,125 after getting 25% discount. If he sells it by allowing 10% discount on the marked price, then how much does he gain?

- Ans**
- 1. ₹150
 - 2. ₹225
 - 3. ₹325
 - 4. ₹250

Question ID : 65497834232
Status : Answered
Chosen Option : 2

Q.19 A man sells two mobile phones for ₹6,000 each, gaining 25% on one and losing 25% on the other. What is his gain or loss percent in whole transaction (up to two decimal places)?

- Ans**
- 1. Profit, 6.67
 - 2. Loss, 6.67
 - 3. Loss, 6.25
 - 4. Profit, 6.25

Question ID : **65497834246**
Status : **Answered**
Chosen Option : **3**

Q.20 A certain sum amounts to ₹12,236 in $3\frac{3}{4}$ years at 8.8% p.a. at simple interest. What will be the simple interest (in ₹) on the same sum at the same rate in $4\frac{3}{8}$ years?

- Ans**
- 1. 3,624
 - 2. 3,542
 - 3. 3,484
 - 4. 3,524

Question ID : **65497834255**
Status : **Answered**
Chosen Option : **2**

Q.21 A sum of ₹39,000 is divided among A, B, C such that A's share is $\frac{1}{3}$ of B and B gets 20% more than C. A's share is:

- Ans**
- 1. ₹9,000
 - 2. ₹7,500
 - 3. ₹6,000
 - 4. ₹8,000

Question ID : **65497834248**
Status : **Answered**
Chosen Option : **3**

Q.22 6 men and 8 women can complete as much work in a given time as 3 men and 13 women. If a man can complete a work in 12 days, then in how many days will 4 women be able to complete the same work?

- Ans**
- 1. 5 days
 - 2. 8 days
 - 3. 4 days
 - 4. 20 days

Question ID : **65497834234**
Status : **Answered**
Chosen Option : **1**

Q.23 A retailer buys a tracksuit for ₹850. His overhead expenses are ₹50. If he sells the tracksuit for ₹1,170, then what is his profit percentage?

- Ans
- 1. 20
 - 2. 25
 - 3. 22
 - 4. 30

Question ID : 65497834242
Status : Answered
Chosen Option : 4

Q.24 A sum of money becomes double in 5 years at compound interest rate. The same sum of money will be 4 times of itself in:

- Ans
- 1. 12 years
 - 2. 10 years
 - 3. 8 years
 - 4. 15 years

Question ID : 65497834249
Status : Answered
Chosen Option : 2

Q.25 The circumference of a circle of diameter 14 cm is the same as the perimeter of a square. The area of the square is (take $\pi = \frac{22}{7}$):

- Ans
- 1. 400 cm²
 - 2. 256 cm²
 - 3. 121 cm²
 - 4. 289 cm²

Question ID : 65497834251
Status : Answered
Chosen Option : 3

Section : Part D English

Q.1 Select the most appropriate option that can substitute the underlined segment in the given sentence. If there is no need to substitute it, select 'No substitution required'.

I don't have some money at all.

- Ans
- 1. few
 - 2. No substitution required
 - 3. any
 - 4. little

Question ID : 65497834264
Status : Answered
Chosen Option : 3

Q.2 Select the most appropriate synonym of the given word.

Precarious

- Ans 1. Safe
 2. Insecure
 3. Stable
 4. Strange

Question ID : 65497834269
Status : Answered
Chosen Option : 1

Q.3 The following sentence has been split into four segments. Identify the segment that contains a grammatical error.

I will / be in school / for / 7 a.m. to 2 p.m.

- Ans 1. be in school
 2. 7 a.m. to 2 p.m.
 3. for
 4. I will

Question ID : 65497834267
Status : Answered
Chosen Option : 3

Q.4 Select the INCORRECTLY spelt word.

- Ans 1. Hover
 2. Dreary
 3. Monark
 4. Adorn

Question ID : 65497834274
Status : Answered
Chosen Option : 3

Q.5 Select the most appropriate option that can substitute the underlined segment in the given sentence. If there is no need to substitute it, select 'No substitution required'.

I have been worked hard to finish this project.

- Ans 1. No substitution required
 2. have been working
 3. working
 4. had been worked

Question ID : 65497834265
Status : Answered
Chosen Option : 2

Q.6 Select the correctly spelt word.

- Ans 1. Harbore
 2. Glossery
 3. Premire
 4. Orchestra

Question ID : 65497834273
Status : Answered
Chosen Option : 1

Q.7 Select the most appropriate option to fill in the blank.

Please _____ my subscription of the children's magazine.

- Ans 1. settle
 2. renew
 3. finish
 4. regain

Question ID : 65497834266
Status : Answered
Chosen Option : 2

Q.8 The following sentence has been divided into parts. One of them may contain an error. Select the part that contains the error from the given options. If you don't find any error, select 'No error' as your answer.

Jyoti is one of / the best police officer / in this town.

- Ans 1. No error
 2. the best police officer
 3. in this town
 4. Jyoti is one of

Question ID : 65497834258
Status : Answered
Chosen Option : 2

Q.9 Select the most appropriate ANTONYM of the given word.

Obscure

- Ans 1. Vague
 2. Dim
 3. Clear
 4. Doubtful

Question ID : 65497834256
Status : Answered
Chosen Option : 3

Q.10 Select the most appropriate meaning of the given idiom.

Spick and span

- Ans 1. Safe and secure
 2. Over and over again
 3. Very neat and clean
 4. Far from each other

Question ID : 65497834261
Status : Answered
Chosen Option : 1

Q.11 Select the option that can be used as a one-word substitute for the given group of words.

A remedy for all diseases

- Ans 1. Medicine
 2. Treatment
 3. Panacea
 4. Diagnosis

Question ID : 65497834272
Status : Answered
Chosen Option : 3

Q.12 Select the most appropriate option to fill in the blank.

The company is going to _____ the North Sea for oil.

- Ans 1. search
 2. tour
 3. explore
 4. traverse

Question ID : 65497834260
Status : Answered
Chosen Option : 3

Q.13 Select the most appropriate ANTONYM of the given word.

Reverence

- Ans 1. Respect
 2. Admiration
 3. Awe
 4. Contempt

Question ID : 65497834270
Status : Answered
Chosen Option : 4

Q.14 Select the most appropriate option that can substitute the underlined segment in the given sentence. If there is no need to substitute it, select 'No substitution required'.

During foggy weather, flights are often cancelled, isn't it?

- Ans 1. do they
 2. aren't they
 3. No substitution required
 4. haven't they

Question ID : 65497834262
Status : Answered
Chosen Option : 3

Q.15 Select the most appropriate option to fill in the blank.

The police _____ the protestors from entering the parliament.

- Ans
- 1. persuaded
 - 2. presumed
 - 3. protected
 - 4. prevented

Question ID : 65497834275
Status : Answered
Chosen Option : 4

Q.16 Select the option that can be used as a one-word substitute for the given group of words.

A place where money is coined

- Ans
- 1. Store
 - 2. Mint
 - 3. Factory
 - 4. Industry

Question ID : 65497834271
Status : Answered
Chosen Option : 2

Q.17 The following sentence has been split into four segments. Identify the segment that contains a grammatical error.

The poet / and the author / is awarded / by the President.

- Ans
- 1. by the President
 - 2. The poet
 - 3. and the author
 - 4. is awarded

Question ID : 65497834268
Status : Answered
Chosen Option : 4

Q.18 Select the most appropriate synonym of the given word.

Noble

- Ans
- 1. Dignified
 - 2. Poor
 - 3. Ordinary
 - 4. Normal

Question ID : 65497834259
Status : Answered
Chosen Option : 1

Q.19 Select the option that can be used as a one-word substitute for the given group of words.

The sound made by bees

Ans ✓ 1. Buzz

✗ 2. Hiss

✗ 3. Moo

✗ 4. Coo

Question ID : 65497834257

Status : Answered

Chosen Option : 1

Q.20 Select the most appropriate meaning of the given idiom.

At a snail's pace

Ans ✗ 1. Quickly

✓ 2. Very slowly

✗ 3. Peacefully

✗ 4. Carelessly

Question ID : 65497834263

Status : Answered

Chosen Option : 2

Comprehension:

In the following passage, some words have been deleted. Read the passage carefully and select the most appropriate option to fill in each blank.

Elephants regularly swarm to the landfill (1) _____ near a wildlife sanctuary in Sri Lanka. (2) _____ with food scraps, they consume plastic, (3) _____ slowly kills them, officials say. Images (4) _____ the elephants foraging through the waste (5) _____ environmentalists. Plastic from landfill sites is a known killer of wild elephants, which are estimated to number about 7,500 in Sri Lanka.

SubQuestion No : 21

Q.21 Select the most appropriate option to fill in blank no. 1.

Ans ✓ 1. site

✗ 2. scene

✗ 3. scenery

✗ 4. sight

Question ID : 65497834277

Status : Answered

Chosen Option : 1

Comprehension:

In the following passage, some words have been deleted. Read the passage carefully and select the most appropriate option to fill in each blank.

Elephants regularly swarm to the landfill (1) _____ near a wildlife sanctuary in Sri Lanka. (2) _____ with food scraps, they consume plastic, (3) _____ slowly kills them, officials say. Images (4) _____ the elephants foraging through the waste (5) _____ environmentalists. Plastic from landfill sites is a known killer of wild elephants, which are estimated to number about 7,500 in Sri Lanka.

SubQuestion No : 22

Q.22 Select the most appropriate option to fill in blank no. 2.

- Ans 1. Beside
 2. Next
 3. Along
 4. Across

Question ID : 65497834278
Status : Answered
Chosen Option : 3

Comprehension:

In the following passage, some words have been deleted. Read the passage carefully and select the most appropriate option to fill in each blank.

Elephants regularly swarm to the landfill (1) _____ near a wildlife sanctuary in Sri Lanka. (2) _____ with food scraps, they consume plastic, (3) _____ slowly kills them, officials say. Images (4) _____ the elephants foraging through the waste (5) _____ environmentalists. Plastic from landfill sites is a known killer of wild elephants, which are estimated to number about 7,500 in Sri Lanka.

SubQuestion No : 23

Q.23 Select the most appropriate option to fill in blank no. 3.

- Ans 1. what
 2. whom
 3. which
 4. who

Question ID : 65497834279
Status : Answered
Chosen Option : 3

Comprehension:

In the following passage, some words have been deleted. Read the passage carefully and select the most appropriate option to fill in each blank.

Elephants regularly swarm to the landfill (1) _____ near a wildlife sanctuary in Sri Lanka. (2) _____ with food scraps, they consume plastic, (3) _____ slowly kills them, officials say. Images (4) _____ the elephants foraging through the waste (5) _____ environmentalists. Plastic from landfill sites is a known killer of wild elephants, which are estimated to number about 7,500 in Sri Lanka.

SubQuestion No : 24

Q.24 Select the most appropriate option to fill in blank no. 4.

- Ans 1. on
 2. of
 3. for
 4. in

Question ID : 65497834280
Status : Answered
Chosen Option : 2

Comprehension:

In the following passage, some words have been deleted. Read the passage carefully and select the most appropriate option to fill in each blank.

Elephants regularly swarm to the landfill (1) _____ near a wildlife sanctuary in Sri Lanka. (2) _____ with food scraps, they consume plastic, (3) _____ slowly kills them, officials say. Images (4) _____ the elephants foraging through the waste (5) _____ environmentalists. Plastic from landfill sites is a known killer of wild elephants, which are estimated to number about 7,500 in Sri Lanka.

SubQuestion No : 25

Q.25 Select the most appropriate option to fill in blank no. 5.

- Ans 1. are shocking
 2. have been shocking
 3. has shocked
 4. have shocked

Question ID : 65497834281
Status : Answered
Chosen Option : 4

Section : Part D Hindi

Q.1 दिये गये वाक्यांश के लिए एक शब्द दीजिये।

व्यर्थ खर्च करने वाला

- Ans 1. अतिव्ययी
 2. अल्पव्ययी
 3. अपव्ययी
 4. मितव्ययी

Question ID : 65497834293
Status : Not Answered
Chosen Option : --

Q.2 दिये गये वाक्यांश के लिए एक सार्थक शब्द दीजिए।

कविता रचनेवाली स्त्री

- Ans 1. कवयित्री
 2. कवियत्री
 3. कवियित्री
 4. विदुषी

Question ID : 65497834284
Status : Not Answered
Chosen Option : --

Q.3 दिए गए शब्द के समानार्थी शब्द का चयन करें।

बेटी

- Ans 1. वनिता
 2. अगना
 3. वासा
 4. दुहिता

Question ID : 65497834295
Status : Not Answered
Chosen Option : --

Q.4 निम्नलिखित में से शुद्ध वर्तनी वाला शब्द कौन सा है?

- Ans 1. कोतुहल
 2. कौतुहल
 3. कौतूहल
 4. कोतूहल

Question ID : 65497834300
Status : Not Answered
Chosen Option : --

Q.5 रिक्त स्थान की पूर्ति के लिए सबसे उपयुक्त शब्द का चयन कीजिए।

मुझे दुर्घटना की _____ है।

- Ans 1. अभिलाषा
 2. आशा
 3. इच्छा
 4. आशका

Question ID : 65497834286
Status : Not Answered
Chosen Option : --

Q.6 उस विकल्प का चयन करें जो निम्न मुहावरे का अर्थ व्यक्त करता है।

कान भरना

- Ans 1. बदनाम करना
 2. सावधान करना
 3. चुगली करना
 4. प्रभावित करना

Question ID : 65497834297
Status : Not Answered
Chosen Option : --

Q.7 'नीरुजता' शब्द का विलोम शब्द कौनसा है?

- Ans 1. नीरस
 2. निर्धारित
 3. रुग्णता
 4. निर्दोष

Question ID : 65497834288
Status : Not Answered
Chosen Option : --

Q.8 दिए गए शब्द का समानार्थी शब्द बताइए-

किनारा

- Ans 1. केतु
 2. कूल
 3. केली
 4. कुल

Question ID : 65497834292
Status : Not Answered
Chosen Option : --

Q.9 'शिगूफा खिलाना' इस मुहावरे का अर्थ है-

- Ans
- 1. बहुत उपद्रव करना
 - 2. काल्पनिक योजनाएँ बनाना
 - 3. विचित्र बात कहना
 - 4. सिफ़ारिश करवाना

Question ID : 65497834289
Status : Not Answered
Chosen Option : --

Q.10 दिये गये वाक्यांश के लिए एक सार्थक शब्द का चयन कीजिए।

जो स्वयं उत्पन्न हुआ हो

- Ans
- 1. स्वयंभू
 - 2. स्वावलंबी
 - 3. सार्वभौम
 - 4. स्वाधीन

Question ID : 65497834290
Status : Not Answered
Chosen Option : --

Q.11 दिए गए वाक्य में रेखांकित खंड को प्रतिस्थापित करने के लिए सबसे उपयुक्त विकल्प का चयन करें।
यदि इसे प्रतिस्थापित करने की आवश्यकता नहीं है, तो विकल्प 'किसी बदलाव की आवश्यकता नहीं है'
का चयन करें।

योगी ने समाधि लगाई और अतर्धान हो गया।

- Ans
- 1. और अर्धान हो गया।
 - 2. और अतर्धान हो गया।
 - 3. किसी बदलाव की आवश्यकता नहीं है।
 - 4. और अत्यर्धान हो गया।

Question ID : 65497834282
Status : Not Answered
Chosen Option : --

Q.12 रिक्त स्थान की पूर्ति के लिए सबसे उपयुक्त शब्द का चयन कीजिए।

_____ न करने वाले लड़के अच्छे अंक नहीं पा सकते।

- Ans
- 1. प्रार्थना
 - 2. परिश्रम
 - 3. भक्ति
 - 4. पूजा

Question ID : 65497834283
Status : Not Answered
Chosen Option : --

Q.13 दिए गए शब्द का विलोम चुनें।

आदर

- Ans
- 1. अपमान
 - 2. सम्मान
 - 3. सादर
 - 4. निरादर

Question ID : 65497834296
Status : Not Answered
Chosen Option : --

Q.14 दिए गए वाक्य का वह भाग ज्ञात करें जिसमें कोई त्रुटि है। यदि कोई त्रुटि नहीं है, तो 'कोई त्रुटि नहीं है' चुनें।

हमारा लक्ष्य (1)/ देश की चहुमुखी प्रगति (2)/ होनी चाहिए (3)/ कोई त्रुटि नहीं है (4)

- Ans
- 1. 3
 - 2. 2
 - 3. 4
 - 4. 1

Question ID : 65497834294
Status : Not Answered
Chosen Option : --

Q.15 दिये गये वाक्य में रेखांकित अश को प्रतिस्थापित करने के लिए सबसे उपयुक्त विकल्प का चयन करें।

युवती ने स्वर्ण आवरण पहन रखे हैं।

- Ans
- 1. वस्त्र
 - 2. आभरण
 - 3. सुवर्ण
 - 4. परिधान

Question ID : 65497834301
Status : Not Answered
Chosen Option : --

Q.16 दिए गए वाक्य का वह भाग ज्ञात करें जिसमें कोई त्रुटि है। यदि कोई त्रुटि नहीं है, तो 'कोई त्रुटि नहीं है' चुनें।

नाटक समारोह का (1)/ सारा उत्तरदायित्व (2)/ छात्रों के ऊपर है। (3)/ कोई त्रुटि नहीं है (4)

- Ans
- 1. 2
 - 2. 3
 - 3. 1
 - 4. 4

Question ID : 65497834287
Status : Not Answered
Chosen Option : --

Q.17 दिए गए वाक्य में रेखांकित खंड को प्रतिस्थापित करने के लिए सबसे उपयुक्त विकल्प का चयन करें। यदि इसे प्रतिस्थापित करने की आवश्यकता नहीं है, तो विकल्प 'किसी बदलाव की आवश्यकता नहीं है' का चयन करें।

भारत के और देशों के साथ सबध अच्छे हैं।

- Ans
- 1. और देशों के साथ
 - 2. और देशों के साथ
 - 3. और देश के साथ
 - 4. किसी बदलाव की आवश्यकता नहीं है।

Question ID : 65497834285

Status : Not Answered

Chosen Option : --

Q.18 रिक्त स्थान की पूर्ति के लिए सबसे उपयुक्त शब्द का चयन करें।

उसे फासी पर _____ गया था।

- Ans
- 1. लटकाया
 - 2. चढ़ाया
 - 3. झुलाया
 - 4. उठाया

Question ID : 65497834298

Status : Not Answered

Chosen Option : --

Q.19 दिए गए वाक्य का वो भाग ज्ञात करें जिसमें कोई त्रुटि है। यदि कोई त्रुटि नहीं है, तो 'कोई त्रुटि नहीं है' चुनें।

प्रत्येक भारतवासी को (1)\ हिंदी का व्यावहारिक (2)\ ज्ञान होनी चाहिए। (3)\ कोई त्रुटि नहीं है (4)

- Ans
- 1. 4
 - 2. 1
 - 3. 3
 - 4. 2

Question ID : 65497834291

Status : Not Answered

Chosen Option : --

Q.20 निम्नलिखित में से शुद्ध वर्तनी वाला शब्द कौन सा है?

- Ans
- 1. यथेस्त
 - 2. यथेष्ठ
 - 3. यथेष्ट
 - 4. यथेस्थ

Question ID : 65497834299

Status : Not Answered

Chosen Option : --

Comprehension:

दिए गए गद्यांश में से कुछ शब्द हटा दिए गए हैं। सबधित प्रश्नों में प्रत्येक सख्या के लिए सबसे उपयुक्त विकल्प का चयन कीजिए।

मनुष्य स्वयं (1) _____ का निर्माता है। पर कायर मनुष्य नहीं वरन् (2) _____ ही भाग्य का सामर्थ्य रखता है। (3) _____ तो देवता को पुकारता है। साहसी मनुष्य भाग्य के हाथ की (4) _____ नहीं बनता अपितु स्वयं अपने भाग्य का निर्माण करता है, क्योंकि उसे अपनी शक्ति पर विश्वास होता है। मनुष्य के समक्ष कार्यों की सफलता, असफलता भाग्य पर नहीं, उसके (5) _____ पर आधारित है।

SubQuestion No : 21

Q.21 गद्यांश के रिक्त स्थान (1) के लिए सर्वाधिक उपयुक्त शब्द होगा-

- Ans
- 1. देश
 - 2. विश्व
 - 3. भाग्य
 - 4. शक्ति

Question ID : 65497834303

Status : Not Answered

Chosen Option : --

Comprehension:

दिए गए गद्यांश में से कुछ शब्द हटा दिए गए हैं। सबधित प्रश्नों में प्रत्येक सख्या के लिए सबसे उपयुक्त विकल्प का चयन कीजिए।

मनुष्य स्वयं (1) _____ का निर्माता है। पर कायर मनुष्य नहीं वरन् (2) _____ ही भाग्य का सामर्थ्य रखता है। (3) _____ तो देवता को पुकारता है। साहसी मनुष्य भाग्य के हाथ की (4) _____ नहीं बनता अपितु स्वयं अपने भाग्य का निर्माण करता है, क्योंकि उसे अपनी शक्ति पर विश्वास होता है। मनुष्य के समक्ष कार्यों की सफलता, असफलता भाग्य पर नहीं, उसके (5) _____ पर आधारित है।

SubQuestion No : 22

Q.22 गद्यांश के रिक्त स्थान (2) के लिए सर्वाधिक उपयुक्त शब्द होगा-

- Ans
- 1. सत
 - 2. सबल
 - 3. ईश्वर
 - 4. दुर्बल

Question ID : 65497834304

Status : Not Answered

Chosen Option : --

Comprehension:

दिए गए गद्यांश में से कुछ शब्द हटा दिए गए हैं। सबधित प्रश्नों में प्रत्येक सख्या के लिए सबसे उपयुक्त विकल्प का चयन कीजिए।

मनुष्य स्वयं (1) _____ का निर्माता है। पर कायर मनुष्य नहीं वरन् (2) _____ ही भाग्य का सामर्थ्य रखता है। (3) _____ तो देवता को पुकारता है। साहसी मनुष्य भाग्य के हाथ की (4) _____ नहीं बनता अपितु स्वयं अपने भाग्य का निर्माण करता है, क्योंकि उसे अपनी शक्ति पर विश्वास होता है। मनुष्य के समक्ष कार्यों की सफलता, असफलता भाग्य पर नहीं, उसके (5) _____ पर आधारित है।

SubQuestion No : 23

Q.23 गद्यांश के रिक्त स्थान (3) के लिए सर्वाधिक उपयुक्त शब्द होगा-

- Ans
- 1. शक्तिशाली
 - 2. कायर
 - 3. कमजोर
 - 4. साहसी

Question ID : 65497834305

Status : Not Answered

Chosen Option : --

Comprehension:

दिए गए गद्यांश में से कुछ शब्द हटा दिए गए हैं। सबंधित प्रश्नों में प्रत्येक सख्या के लिए सबसे उपयुक्त विकल्प का चयन कीजिए।

मनुष्य स्वयं (1) _____ का निर्माता है। पर कायर मनुष्य नहीं वरन् (2) _____ ही भाग्य का सामर्थ्य रखता है। (3) _____ तो देवता को पुकारता है। साहसी मनुष्य भाग्य के हाथ की (4) _____ नहीं बनता अपितु स्वयं अपने भाग्य का निर्माण करता है, क्योंकि उसे अपनी शक्ति पर विश्वास होता है। मनुष्य के समक्ष कार्यों की सफलता, असफलता भाग्य पर नहीं, उसके (5) _____ पर आधारित है।

SubQuestion No : 24

Q.24 गद्यांश के रिक्त स्थान (4) के लिए सर्वाधिक उपयुक्त शब्द होगा-

- Ans 1. खिलौना
 2. कठपुतली
 3. नियता
 4. निर्माता

Question ID : 65497834306

Status : Not Answered

Chosen Option : --

Comprehension:

दिए गए गद्यांश में से कुछ शब्द हटा दिए गए हैं। सबंधित प्रश्नों में प्रत्येक सख्या के लिए सबसे उपयुक्त विकल्प का चयन कीजिए।

मनुष्य स्वयं (1) _____ का निर्माता है। पर कायर मनुष्य नहीं वरन् (2) _____ ही भाग्य का सामर्थ्य रखता है। (3) _____ तो देवता को पुकारता है। साहसी मनुष्य भाग्य के हाथ की (4) _____ नहीं बनता अपितु स्वयं अपने भाग्य का निर्माण करता है, क्योंकि उसे अपनी शक्ति पर विश्वास होता है। मनुष्य के समक्ष कार्यों की सफलता, असफलता भाग्य पर नहीं, उसके (5) _____ पर आधारित है।

SubQuestion No : 25

Q.25 गद्यांश के रिक्त स्थान (5) के लिए सर्वाधिक उपयुक्त शब्द होगा-

- Ans 1. राजनीतिक बल
 2. मानसिक बल
 3. शारीरिक बल
 4. आर्थिक बल

Question ID : 65497834307

Status : Not Answered

Chosen Option : --

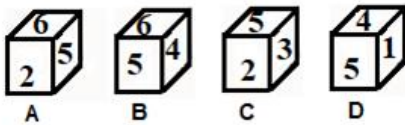
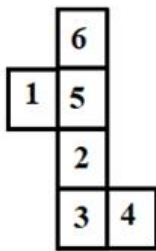
**SSC
GD**

**Previous Year Paper
24 Nov 2021 Shift 3**

Exam Date	24/11/2021
Exam Time :	4:00 PM - 5:30 PM
Subject	Constable GD 2021

Section : Part A General Intelligence and Reasoning

Q.1 Select the dice that can be formed by folding the given sheet along the lines.



- Ans
- 1. A, B, C and D
 - 2. Only A
 - 3. Only A and C
 - 4. Only B

Question ID : 65497835719
 Status : Answered
 Chosen Option : 2

Q.2 Select the number from among the given options that can replace the question mark (?) in the following series.

8, 25, 57, 221, 449, ?

- Ans
- 1. 1879
 - 2. 1798
 - 3. 1978
 - 4. 1789

Question ID : 65497835728
 Status : Not Answered
 Chosen Option : --

Q.3 Four letter-clusters have been given, out of which three are alike in some manner and one is different. Select the letter-cluster that is different.

- Ans 1. XVR
 2. KIEA
 3. RPLF
 4. MKGA

Question ID : 65497835713
Status : Answered
Chosen Option : 2

Q.4 Select the option that is related to the third term in the same way as the second term is related to the first term.

SYMBOL : YSBMLO :: BANQUETS : ?

- Ans 1. ABQNEUST
 2. NABEUQST
 3. QNABSTEU
 4. ABQNSTEU

Question ID : 65497835705
Status : Answered
Chosen Option : 1

Q.5 Four friends Rati, Areema , Sonali and Geet are sitting side by side on the bed facing towards north . Sonali is sitting towards left of Rati. Rati is sitting to immediate left of Areema. Geet is sitting between Rati and Sonali. Who is sitting at second place from the right end?

- Ans 1. Geet
 2. Rati
 3. Sonali
 4. Areema

Question ID : 65497835724
Status : Answered
Chosen Option : 2

Q.6 If the ratio of the present ages of Shikha and Rajkumar is 2 : 1, and 15 years ago the ratio of their ages was 3 : 1, then the present age (in years) of Shikha is:

- Ans 1. 45
 2. 75
 3. 60
 4. 30

Question ID : 65497835711
Status : Answered
Chosen Option : 3

Q.7 If 'P' denotes 'addition', 'Q' denotes 'multiplication', 'R' denotes 'subtraction', and 'S' denotes 'division', then what will be the value of the following expression?

45S (3P7) P5S (8S4) P9Q (15S5)

- Ans 1. 32
 2. 28
 3. 38
 4. 34

Question ID : 65497835718
Status : Answered
Chosen Option : 4

Q.8 Six friends R, S, T, U, V and W are sitting in a straight line. T is third from the left and fourth from the right. V is between T and S. Also, S is to the immediate left of U. R is between T and W. Find the position of V from the right side.

- Ans 1. Second
 2. Fifth
 3. Fourth
 4. Third

Question ID : 65497835715
Status : Answered
Chosen Option : 4

Q.9 Select the option that is related to the third number in the same way as the second number is related to the first number and the sixth number is related to the fifth number.

23 : 368 :: 25 : ? :: 21 : 294

- Ans 1. 382
 2. 450
 3. 441
 4. 371

Question ID : 65497835717
Status : Answered
Chosen Option : 2

Q.10 In a certain code language, 'DOCTOR' is written as 'SQWGTJ' and 'SINGER' is written as 'SGJRNY'. How will 'TAILOR' be written in that language?

- Ans 1. TOOMFZ
 2. TQQNEZ
 3. SQOMFX
 4. SQOMFZ

Question ID : 65497835708
Status : Answered
Chosen Option : 4

Q.11 Select the option that is related to the third word in the same way as the second word is related to the first word.

Syphilis : Bacteria :: Tinea pedis : ?

- Ans
- 1. Protozoa
 - 2. Algae
 - 3. Virus
 - 4. Fungi

Question ID : 65497835723
Status : Answered
Chosen Option : 1

Q.12 Select the correct mirror image of the given combination when the mirror is placed at 'PQ' as shown.

KURDARAM
P
|
Q

- Ans
- 1. MARKURDA
 - 2. MARADRAM
 - 3. RANKURDA
 - 4. MARADRUK

Question ID : 65497835721
Status : Answered
Chosen Option : 2

Q.13 Read the given statements and conclusions carefully. Assuming that the information given in the statements is true, even if it appears to be at variance with commonly known facts, decide which of the given conclusions logically follow(s) from the statements.

Statements:
Some bags are pens.
All pens are boxes.
All bags are books.

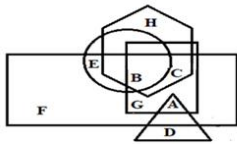
Conclusions:
I. Some books are boxes.
II. Some boxes are bags.
III. Some books are pens.

- Ans
- 1. Only conclusions I and III follow
 - 2. Only conclusions II and III follow
 - 3. Only conclusions I and II follow
 - 4. All conclusions I, II and III follow

Question ID : 65497835709
Status : Answered
Chosen Option : 2

Q.14 In the following figure, the square represents 'natural satellite', the circle represents 'stars', the rectangle represents 'planets', the hexagon represents 'atmosphere', and the triangle represents 'artificial satellite'.

Which letter represents planets but NOT stars which have atmosphere and natural satellite but NOT artificial satellite.



- Ans
- 1. C
 - 2. E
 - 3. A
 - 4. B

Question ID : 65497835725
 Status : Answered
 Chosen Option : 1

Q.15 Select the combination of letters that when sequentially placed in the blanks of the given series will complete the series.

I _ _ Q Z _ _ K _ _ I J _ Q Z

- Ans
- 1. IJKQZQK
 - 2. IQZIJKI
 - 3. JKIJQZK
 - 4. JKQZKI

Question ID : 65497835727
 Status : Answered
 Chosen Option : 3

Q.16 Select the option in which the given figure is embedded (rotation is NOT allowed).

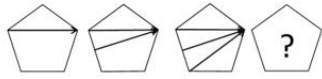


Ans

- 1.
- 2.
- 3.
- 4.

Question ID : 65497835720
 Status : Answered
 Chosen Option : 2

Q.17 Select the figure from among the given options that can replace the question mark (?) in the following series.



Ans

✗ 1.



✗ 2.



✓ 3.



✗ 4.

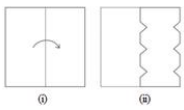


Question ID : 65497835729

Status : Answered

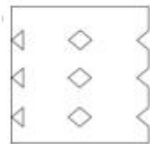
Chosen Option : 3

Q.18 The sequence of folding a piece of paper and the manner in which the folded paper has been cut is shown in the following figures. How would this paper look when unfolded?




Ans

✗ 1.



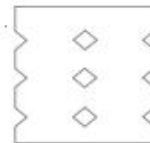
✗ 2.



✗ 3.



✓ 4.



Question ID : 65497835712

Status : Answered

Chosen Option : 4

Q.19 Select the correct option that indicates the arrangement of the given words in the order in which they appear in an English dictionary.

1. Restates
2. Resistance
3. Restoration
4. Resonant
5. Resection

Ans 1. 5, 2, 4, 1, 3
 2. 5, 2, 1, 4, 3
 3. 5, 2, 4, 3, 1
 4. 5, 4, 2, 3, 1

Question ID : 65497835726
Status : Answered
Chosen Option : 1

Q.20 Select the letter-cluster from among the given options that can replace the question mark (?) in the following series.

AS, CQ, EO, ?

Ans 1. HM
 2. GN
 3. GM
 4. HN

Question ID : 65497835722
Status : Answered
Chosen Option : 3

Q.21 In a certain code language, 'BOWLER' is written as 'C p X M f S' and 'NEAT' is written as 'O f b U'. How will 'SERIOUS' be written in that language?

Ans 1. TfsJpUt
 2. TfSJPwt
 3. TfTjPVT
 4. TfSjpvT

Question ID : 65497835706
Status : Answered
Chosen Option : 4

Q.22 Select the option in which the numbers do NOT share the same relationship as that shared by the numbers in the given number-triad.

(3, 6, 18)

Ans 1. (9, 18, 54)
 2. (7, 14, 42)
 3. (8, 16, 56)
 4. (6, 12, 36)

Question ID : 65497835710
Status : Answered
Chosen Option : 4

Q.23 Select the number from among the given options that can replace the question mark (?) in the following series.

5, 16, 28, 36, 71, 90, 234, 342, ?

- Ans
- 1. 893
 - 2. 739
 - 3. 839
 - 4. 793

Question ID : 65497835716
Status : Not Answered
Chosen Option : --

Q.24 If 'A + B' means 'A is the daughter of B', 'A × B' means 'A is the sister of B', and 'A = B' means 'A is the wife of B', then how is G related to R in the expression 'C × G × U + M = R'?

- Ans
- 1. Son
 - 2. Mother
 - 3. Daughter
 - 4. Sister

Question ID : 65497835707
Status : Answered
Chosen Option : 3

Q.25 In a certain code language, 'TIKRI' is coded as '201811369'. How will 'BOARD' be coded in that language?

- Ans
- 1. 2151364
 - 2. 2151184
 - 3. 2301364
 - 4. 2301184

Question ID : 65497835714
Status : Answered
Chosen Option : 3

Section : Part B General Knowledge and General Awareness

Q.1 _____ served as the summer capital of British India between 1864 and 1939.

- Ans
- 1. Kalimpong
 - 2. Shimla
 - 3. Mount Abu
 - 4. Gangtok

Question ID : 65497835737
Status : Answered
Chosen Option : 2

Q.2 Which of the following law states that, "The force between two objects is directly proportional to the product of their masses?"

- Ans
- 1. law of motion
 - 2. law of change of momentum
 - 3. law of inertia
 - 4. law of gravitation

Question ID : 65497835749
Status : Answered
Chosen Option : 3

Q.3 On the basis of which phenomenon does a jet engine work?

- Ans
- 1. Conservation of acceleration
 - 2. Conservation of circular momentum
 - 3. Conservation of velocity
 - 4. Conservation of linear momentum

Question ID : 65497835741
Status : Answered
Chosen Option : 4

Q.4 Where will India's first home for transgender children in need of care and protection soon be established?

- Ans
- 1. Mumbai
 - 2. Bengaluru
 - 3. Delhi
 - 4. Chennai

Question ID : 65497835751
Status : Answered
Chosen Option : 2

Q.5 To which of the following states does the Aji Lamu folk dance belong?

- Ans
- 1. Assam
 - 2. Tripura
 - 3. Manipur
 - 4. Arunachal Pradesh

Question ID : 65497835739
Status : Answered
Chosen Option : 4

Q.6 At Indo Myanmar border which hills adjoin the Mizo Hills and Manipur Hills of the Eastern Highlands of India?

- Ans
- 1. Dongkya
 - 2. Toba Kakar
 - 3. Khasi
 - 4. Chin

Question ID : 65497835730
Status : Answered
Chosen Option : 3

Q.7 Which of the following Constitutional Amendment Acts made it compulsory for the President to give his assent to a Constitutional Amendment Bill?

- Ans
- 1. 100th Amendment Act, 2015
 - 2. 42nd Amendment Act, 1976
 - 3. 24th Amendment Act, 1971
 - 4. 44th Amendment Act, 1978

Question ID : 65497835747
Status : Answered
Chosen Option : 2

Q.8 Who among the following was honoured with the 2020 Nobel Prize for Literature?

- Ans
- 1. Alice Munro
 - 2. Louise Gluck
 - 3. Doris Lessing
 - 4. Kazuo Ishiguro

Question ID : 65497835744
Status : Answered
Chosen Option : 2

Q.9 Chirag Shetty who has been awarded with Arjuna Award in 2020 is related to which of the following sports?

- Ans
- 1. Cricket
 - 2. Hockey
 - 3. Swimming
 - 4. Badminton

Question ID : 65497835738
Status : Answered
Chosen Option : 4

Q.10 Chanakya was Prime Minister under the reign of _____.

- Ans
- 1. Chandragupta Maurya
 - 2. Harshavardhana
 - 3. Bindusara
 - 4. Ashoka

Question ID : 65497835731
Status : Answered
Chosen Option : 1

Q.11 In which city is the Salar Jung Museum situated?

- Ans
- 1. Chennai
 - 2. Bengaluru
 - 3. Hyderabad
 - 4. Thiruvananthapuram

Question ID : 65497835740
Status : Not Answered
Chosen Option : --

Q.12 'Swarnajayanti Gram Swarojgar Yojana' ('SGSY') was launched in the year _____.

- Ans 1. 1999
 2. 2005
 3. 2002
 4. 1995

Question ID : 65497835735
Status : Answered
Chosen Option : 3

Q.13 As per the Census of India 2011, a person aged _____ and above, who can both read and write with understanding in any language, is treated as literate.

- Ans 1. 6
 2. 4
 3. 7
 4. 5

Question ID : 65497835753
Status : Answered
Chosen Option : 1

Q.14 Who among the following was appointed as the Managing Director and Chief Executive Officer of India Post Payments Bank in October 2020?

- Ans 1. Seema Gupta
 2. Apurva Chandra
 3. J Venkatramu
 4. S Aparna

Question ID : 65497835745
Status : Answered
Chosen Option : 3

Q.15 A business enterprise that makes profit primarily through trade, buying goods cheap and selling them at higher prices is known as _____.

- Ans 1. mercenary
 2. bartering
 3. mercantile
 4. merchandising

Question ID : 65497835750
Status : Answered
Chosen Option : 3

Q.16 Small bead-like structures inside the ovary of a flower are called _____.

- Ans 1. ovules
 2. sepals
 3. stamen
 4. petals

Question ID : 65497835742
Status : Answered
Chosen Option : 4

Q.17 _____ bonds are issued in global capital markets outside India by international financial institutions to raise money and lend to Indian companies.

- Ans
- 1. Chandi
 - 2. Mithai
 - 3. Masala
 - 4. Papad

Question ID : 65497835736
Status : Answered
Chosen Option : 1

Q.18 The legendary footballer Diego Maradona, who died in November 2020, had led his country Argentina to a FIFA World Cup title win in:

- Ans
- 1. 1994
 - 2. 1986
 - 3. 1990
 - 4. 1982

Question ID : 65497835746
Status : Not Answered
Chosen Option : --

Q.19 What was the trilateral naval exercise between India, Japan and The US held in November 2020 called?

- Ans
- 1. Simbex -20
 - 2. Malabar
 - 3. Yudh Abhyas
 - 4. Mitra Shakti

Question ID : 65497835733
Status : Answered
Chosen Option : 2

Q.20 बाल न्याय (बच्चों की देखभाल और सुरक्षण) विधेयक, 2014 किस बात की अनुमति देता है?

- Ans
- 1. 14-18 वर्ष की आयु वाले किशोरो को सुधार घरों में भेजा जाना चाहिए।
 - 2. 16-18 वर्ष की आयु वाले किशोरो को अपराधों के लिए 60 दिनों तक सामुदायिक सेवा में रखने का आदेश दिया जाना चाहिए।
 - 3. 16-18 वर्ष की आयु वाले किशोरो के माता-पिता को किशोर द्वारा किए गए अपराध के लिए अपराधी ठहराने की कोशिश की जानी चाहिए।
 - 4. 16-18 वर्ष की आयु वाले किशोरो को जघन्य अपराध के लिए वयस्को की तरह सजा दी जानी चाहिए।

Question ID : 65497835732
Status : Not Answered
Chosen Option : --

Q.21 Which of the following tribes belongs to the Nilgiri Mountains?

- Ans
- 1. Angamis
 - 2. Todas
 - 3. Jarawas
 - 4. Onges

Question ID : 65497835734
Status : Answered
Chosen Option : 4

Q.22 Which of the following places/regions is the natural habitat of the Indian wild ass?

- Ans
- 1. Sunderbans
 - 2. Upper Himalayas
 - 3. Plains of Ganga
 - 4. Little Rann of Kutch

Question ID : 65497835743
Status : Answered
Chosen Option : 4

Q.23 Which of the following countries launched the 'Atal Innovation Mission–Sirius Innovation Programme 3.0' in November 2020?

- Ans
- 1. India and Russia
 - 2. India and Australia
 - 3. India and France
 - 4. India and Japan

Question ID : 65497835748
Status : Not Answered
Chosen Option : --

Q.24 How is the 'average income' of a country calculated?

- Ans
- 1. Total income of the country divided by its total population.
 - 2. Total income of all the residents of the country.
 - 3. Total income of the country minus the population.
 - 4. Total income of the country multiplied by its total population.

Question ID : 65497835752
Status : Answered
Chosen Option : 1

Q.25 Who among the following sportspersons is an Indian professional tennis player?

- Ans
- 1. Prakash Padukone
 - 2. Pullela Gopichand
 - 3. Rohan Bopanna
 - 4. Kuldeep Yadav

Question ID : 65497835754
Status : Answered
Chosen Option : 3

Section : Part C Elementary Mathematics

Q.1 A machine X can produce 1000 bolts in 4 hours and another machine Y can produce 1000 bolts in 12 hours. In how many hours can machines X and Y, working together at their respective constant rates, produce 1000 bolts?

- Ans
- 1. 3
 - 2. 2
 - 3. 6
 - 4. 4

Question ID : 65497835772
Status : Answered
Chosen Option : 1

Q.2 In a company, there are 75% skilled workers and the remaining are unskilled. 84% of the skilled workers and 28% of the unskilled workers are permanent. If the number of temporary workers is 150, then the total number of workers in the company is:

- Ans**
- 1. 600
 - 2. 500
 - 3. 480
 - 4. 400

Question ID : **65497835761**
Status : **Answered**
Chosen Option : **2**

Q.3 Rumi earns 40% more wages than those earned by Erica. Charles earns 60% more wages than those earned by Erica. What percentage are the wages earned by Charles more than those earned by Rumi (correct to two decimal places)?

- Ans**
- 1. 12.29%
 - 2. 10.29%
 - 3. 14.9%
 - 4. 14.29%

Question ID : **65497835771**
Status : **Answered**
Chosen Option : **4**

Q.4 A metallic cone of radius 16 cm and height 36 cm is melted and made into spheres of radius 4 cm each. How many spheres are there?

- Ans**
- 1. 36
 - 2. 32
 - 3. 28
 - 4. 45

Question ID : **65497835779**
Status : **Answered**
Chosen Option : **1**

Q.5 Arun invested ₹7,000 at simple interest for two years at 10% per annum. Bharath invested a certain sum at simple interest for 5 years at 8% per annum. If the amount received by Arun is equal to the amount received by Bharath, then the sum invested by Bharath is:

- Ans**
- 1. ₹5,800
 - 2. ₹6,000
 - 3. ₹6,200
 - 4. ₹6,500

Question ID : **65497835763**
Status : **Answered**
Chosen Option : **2**

Q.6 A sum of money at simple interest amounts to ₹650 in 3 years and to ₹754 in 4 years. The sum is:

- Ans**
- 1. ₹308
 - 2. ₹318
 - 3. ₹388
 - 4. ₹338

Question ID : 65497835768
Status : Answered
Chosen Option : 4

Q.7 The present average age of A, B and C is 60 years and that of B and C is 50 years. What is A's present age?

- Ans**
- 1. 80 years
 - 2. 60 years
 - 3. 75 years
 - 4. 45 years

Question ID : 65497835765
Status : Answered
Chosen Option : 1

Q.8 The difference between the simple interest received from two different sources on ₹1,625 for 5 years is ₹32.50. Find the difference between their rates of interest.

- Ans**
- 1. 0.5%
 - 2. 0.6%
 - 3. 0.4%
 - 4. 0.3%

Question ID : 65497835778
Status : Answered
Chosen Option : 1

Q.9 An article is sold at ₹3,520 at a loss of 12%. At what price should it be sold to earn a profit of 18%?

- Ans**
- 1. ₹4,500
 - 2. ₹5,620
 - 3. ₹4,720
 - 4. ₹4,620

Question ID : 65497835762
Status : Answered
Chosen Option : 3

Q.10 When walking at $\frac{6}{7}$ of his usual speed, a man is 10 minutes late. What is the usual time taken by him to cover that distance?

- Ans**
- 1. 72 min
 - 2. 1 hour
 - 3. 1 hour 15 min
 - 4. 120 min

Question ID : 65497835773
Status : Answered
Chosen Option : 2

Q.11 A person gains 15% by selling an item for a certain price. If he sells it at double the price, then what will be his profit percentage?

- Ans**
- 1. 110%
 - 2. 115%
 - 3. 130%
 - 4. 120%

Question ID : 65497835776
Status : Answered
Chosen Option : 3

Q.12 If 20 men can complete a work in 48 days, then how many men should be employed to complete the same work in 40 days?

- Ans**
- 1. 28
 - 2. 24
 - 3. 22
 - 4. 26

Question ID : 65497835759
Status : Answered
Chosen Option : 2

Q.13 If a 9-digit number $5y97405x2$ is divisible by 72, then the value of $(x - 2y)$, for the greatest value of x , is:

- Ans**
- 1. 1
 - 2. 8
 - 3. 4
 - 4. 9

Question ID : 65497835760
Status : Answered
Chosen Option : 1

Q.14 Simplify the following expression.

$$27 \div 3 \times 4 + 4 \div 2 \text{ of } 2$$

Ans

1. $2\frac{1}{8}$

2. 37

3. $6\frac{1}{4}$

4. $1\frac{1}{8}$

Question ID : 65497835757

Status : Answered

Chosen Option : 2

Q.15 The average of 9 observations was 10, with that of the first 5 being 11 and that of the last 5 being 8. What was the 5th observation?

Ans

1. 5

2. 6

3. 4

4. 7

Question ID : 65497835769

Status : Answered

Chosen Option : 1

Q.16 $(1 - 1/2)(1 - 1/3)(1 - 1/4) \dots \dots \dots (1 - 1/23)$ when simplified will give the result as:

Ans

1. $1/22$

2. $1/2$

3. $1/23$

4. $1/3$

Question ID : 65497835774

Status : Not Answered

Chosen Option : --

Q.17 A wrist watch has been sold for ₹2,300 with a profit of 15%. How much is the profit?

Ans

1. ₹320

2. ₹280

3. ₹300

4. ₹250

Question ID : 65497835758

Status : Answered

Chosen Option : 3

Q.18 A train 180 metres in length, travelling at a uniform speed of 92 km/h, crosses another train, travelling in the same direction at a uniform speed of 74 km/h, in 60 seconds. The length of the second train is:

- Ans**
- 1. 150 metres
 - 2. 160 metres
 - 3. 120 metres
 - 4. 140 metres

Question ID : 65497835775
Status : Answered
Chosen Option : 3

Q.19 A shop announced a discount of 25% on trousers. Umesh went to the shop. He wanted to save ₹500 in discount. How many trousers should he buy to do so, if each trouser costs ₹250?

- Ans**
- 1. 8
 - 2. 6
 - 3. 4
 - 4. 5

Question ID : 65497835770
Status : Answered
Chosen Option : 1

Q.20 The ratio of two numbers is 2 : 5. If 7 is subtracted from each, the ratio of new numbers will be 13 : 43. Find the smallest number.

- Ans**
- 1. 20
 - 2. 30
 - 3. 10
 - 4. 15

Question ID : 65497835777
Status : Answered
Chosen Option : 3

Q.21 After allowing a discount of 30% on the marked price of an article, it is sold at ₹455. The marked price of the article is:

- Ans**
- 1. ₹550
 - 2. ₹650
 - 3. ₹554
 - 4. ₹560

Question ID : 65497835766
Status : Answered
Chosen Option : 2

Q.22 In a large school auditorium, if the teachers make rows of students of 16 each, there will be 14 students left. If they make rows of 24 each, then there will be 22 students left. If they make rows of 25 each, there will be 23 students left and if they make rows of 30 each, there will be 28 students left. What is the minimum number of students present in the school?

- Ans**
- 1. 1202
 - 2. 1200
 - 3. 1198
 - 4. 1189

Question ID : 65497835764
Status : Answered
Chosen Option : 3

Q.23 If the sides of a triangle are 8 cm, 8 cm and 12 cm, then what is the area of the triangle?

- Ans**
- 1. $12\sqrt{7}$ cm²
 - 2. 64 cm²
 - 3. 19 cm²
 - 4. 34 cm²

Question ID : 65497835756
Status : Answered
Chosen Option : 1

Q.24 The ratio of boys and girls in a school of 1600 students is 11 : 9. How many more boys should be admitted to the school to make the ratio 4 : 3?

- Ans**
- 1. 100
 - 2. 160
 - 3. 80
 - 4. 387

Question ID : 65497835755
Status : Answered
Chosen Option : 3

Q.25 A bag contains ₹441 in the form of 50 p, 25 p and 20 p coins in the ratio 4 : 3 : 2. Find the number of 25 p coins.

- Ans**
- 1. 240
 - 2. 420
 - 3. 400
 - 4. 460

Question ID : 65497835767
Status : Answered
Chosen Option : 2

Q.1 The following sentence has been split into four segments. Identify the segment that contains a grammatical error.

Tortoises inhabit all of / the world's landmasses / except Australia / and Antarctica.

- Ans** 1. Tortoises inhabit all of
 2. except Australia
 3. the world's landmasses
 4. and Antarctica

Question ID : 65497835791
Status : Not Answered
Chosen Option : --

Q.2 Select the INCORRECTLY spelt word.

- Ans** 1. Nerture
 2. Capture
 3. Structure
 4. Lecture

Question ID : 65497835788
Status : Not Answered
Chosen Option : --

Q.3 Select the option that can be used as a one-word substitute for the given group of words.

A medicine used to nullify the effect of poison

- Ans** 1. Antidote
 2. Antibiotic
 3. Antigen
 4. Antiseptic

Question ID : 65497835796
Status : Not Answered
Chosen Option : --

Q.4 Select the most appropriate meaning of the given idiom.

Toe the line

- Ans** 1. Follow the rules
 2. Start early
 3. Touch the feet
 4. Finish first

Question ID : 65497835787
Status : Not Answered
Chosen Option : --

Q.5 Select the most appropriate option that can substitute the underlined segment in the given sentence. If there is no need to substitute it, select 'No substitution required'.

It was such a funny story that we cannot help laughed.

- Ans
- 1. cannot help laughing
 - 2. could not help laughed
 - 3. No substitution required
 - 4. could not help laughing

Question ID : 65497835780
Status : Not Answered
Chosen Option : --

Q.6 Select the most appropriate option that can substitute the underlined word in the given sentence.

After the bag was shut and barrelled, he realised that he had forgotten to put in the book.

- Ans
- 1. strapped
 - 2. rebounded
 - 3. scrambled
 - 4. scratched

Question ID : 65497835783
Status : Not Answered
Chosen Option : --

Q.7 Select the most appropriate option to fill in the blank.

The boy walked at a fast _____.

- Ans
- 1. pose
 - 2. place
 - 3. peace
 - 4. pace

Question ID : 65497835798
Status : Not Answered
Chosen Option : --

Q.8 The following sentence has been split into four segments. Identify the segment that contains a grammatical error.

We bought / good quality / furnitures / for our new house.

- Ans
- 1. We bought
 - 2. furnitures
 - 3. good quality
 - 4. for our new house

Question ID : 65497835794
Status : Not Answered
Chosen Option : --

Q.9 Select the option that can be used as a one-word substitute for the given group of words.

A place where wild animals are kept in their natural environment

- Ans 1. Pantry
 2. Sanctuary
 3. Aviary
 4. Tannery

Question ID : 65497835786
Status : Not Answered
Chosen Option : --

Q.10 Select the correctly spelt word.

- Ans 1. Conscientios
 2. Conscentious
 3. Conscientous
 4. Conscientious

Question ID : 65497835797
Status : Not Answered
Chosen Option : --

Q.11 The following sentence has been divided into parts. One of them may contain an error. Select the part that contains the error from the given options. If you don't find any error, select 'No error' as your answer.

A good book / is one of / our best friends.

- Ans 1. is one of
 2. A good book
 3. No error
 4. our best friends

Question ID : 65497835781
Status : Not Answered
Chosen Option : --

Q.12 Select the most appropriate option to fill in the blank.

Suddenly, it started raining and I _____ an umbrella from the office.

- Ans 1. borrowed
 2. criticised
 3. lended
 4. substituted

Question ID : 65497835784
Status : Not Answered
Chosen Option : --

Q.13 Select the most appropriate synonym of the given word.

Amusing

- Ans 1. Tiresome
 2. Dull
 3. Laughable
 4. Wise

Question ID : 65497835782
Status : Not Answered
Chosen Option : --

Q.14 Select the most appropriate ANTONYM of the given word.

Diverge

- Ans 1. Depart
 2. Converge
 3. Contrast
 4. Submerge

Question ID : 65497835790
Status : Not Answered
Chosen Option : --

Q.15 Select the most appropriate ANTONYM of the given word.

Chaste

- Ans 1. Vicious
 2. Corrupt
 3. Cruel
 4. Virtuous

Question ID : 65497835795
Status : Not Answered
Chosen Option : --

Q.16 Select the option that can be used as a one-word substitute for the given group of words.

Light rain falling in small drops

- Ans 1. Downpour
 2. Stream
 3. Dew
 4. Drizzle

Question ID : 65497835793
Status : Not Answered
Chosen Option : --

Q.17 Select the most appropriate option that can substitute the underlined segment in the given sentence. If there is no need to substitute it, select 'No substitution required'.

My brother and Raj are good friends. They are knowing each other for at least 10 years.

- Ans
- 1. No substitution required
 - 2. knew
 - 3. have known
 - 4. are known

Question ID : 65497835799
Status : Not Answered
Chosen Option : --

Q.18 Select the most appropriate synonym of the given word.

Hurdle

- Ans
- 1. Rudiment
 - 2. Compliment
 - 3. Obstacle
 - 4. Assistance

Question ID : 65497835792
Status : Not Answered
Chosen Option : --

Q.19 Select the most appropriate option to fill in the blank.

The gentleman looked at the beautiful lady with great _____.

- Ans
- 1. vocation
 - 2. admiration
 - 3. reaction
 - 4. duration

Question ID : 65497835789
Status : Not Answered
Chosen Option : --

Q.20 Select the most appropriate meaning of the given idiom.

Hand in hand

- Ans
- 1. Easily
 - 2. Vigorously
 - 3. In totality
 - 4. Together

Question ID : 65497835785
Status : Not Answered
Chosen Option : --

Comprehension:

In the following passage, some words have been deleted. Read the passage carefully and select the most appropriate option to fill in each blank.

Dust storms do not just happen in the middle of the desert. They can happen in (1)_____ dry area where loose dirt can (2)_____ be picked up. Don't be surprised (3)_____ you suddenly saw a dust storm (4)_____ your way. Dust storms usually (5)_____ without warning.

SubQuestion No : 21

Q.21 Select the most appropriate option to fill in blank no.1.

- Ans 1. few
 2. all
 3. much
 4. any

Question ID : 65497835801
Status : Not Answered
Chosen Option : --

Comprehension:

In the following passage, some words have been deleted. Read the passage carefully and select the most appropriate option to fill in each blank.

Dust storms do not just happen in the middle of the desert. They can happen in (1)_____ dry area where loose dirt can (2)_____ be picked up. Don't be surprised (3)_____ you suddenly saw a dust storm (4)_____ your way. Dust storms usually (5)_____ without warning.

SubQuestion No : 22

Q.22 Select the most appropriate option to fill in blank no.2.

- Ans 1. slowly
 2. casually
 3. properly
 4. easily

Question ID : 65497835802
Status : Not Answered
Chosen Option : --

Comprehension:

In the following passage, some words have been deleted. Read the passage carefully and select the most appropriate option to fill in each blank.

Dust storms do not just happen in the middle of the desert. They can happen in (1)_____ dry area where loose dirt can (2)_____ be picked up. Don't be surprised (3)_____ you suddenly saw a dust storm (4)_____ your way. Dust storms usually (5)_____ without warning.

SubQuestion No : 23

Q.23 Select the most appropriate option to fill in blank no.3.

- Ans 1. whether
 2. so
 3. until
 4. if

Question ID : 65497835803
Status : Not Answered
Chosen Option : --

Comprehension:

In the following passage, some words have been deleted. Read the passage carefully and select the most appropriate option to fill in each blank.

Dust storms do not just happen in the middle of the desert. They can happen in (1)_____ dry area where loose dirt can (2)_____ be picked up. Don't be surprised (3)_____ you suddenly saw a dust storm (4)_____ your way. Dust storms usually (5)_____ without warning.

SubQuestion No : 24

Q.24 Select the most appropriate option to fill in blank no.4.

- Ans 1. heading
 2. directing
 3. deciding
 4. lashing

Question ID : 65497835804
Status : Not Answered
Chosen Option : --

Comprehension:

In the following passage, some words have been deleted. Read the passage carefully and select the most appropriate option to fill in each blank.

Dust storms do not just happen in the middle of the desert. They can happen in (1)_____ dry area where loose dirt can (2)_____ be picked up. Don't be surprised (3)_____ you suddenly saw a dust storm (4)_____ your way. Dust storms usually (5)_____ without warning.

SubQuestion No : 25

Q.25 Select the most appropriate option to fill in blank no.5.

- Ans 1. show
 2. arrive
 3. enter
 4. reach

Question ID : 65497835805
Status : Not Answered
Chosen Option : --

Section : Part D Hindi

Q.1 रिक्त स्थान की पूर्ति के लिए सबसे उपयुक्त शब्द का चयन करें-

राम ने रावण का _____ किया।

- Ans 1. वध
 2. हत्या
 3. मृत्यु
 4. मौत

Question ID : 65497835824
Status : Answered
Chosen Option : 1

Q.2 रिक्त स्थान की पूर्ति के लिए सबसे उपयुक्त शब्द का चयन करें।

_____ के लिए पौष्टिक भोजन आवश्यक है।

- Ans 1. स्वास्थ्य
 2. जीवतता
 3. अस्वास्थ्य
 4. बीमारी

Question ID : 65497835812
Status : Answered
Chosen Option : 1

Q.3 उस विकल्प का चयन करें जो निम्न मुहावरे का सही अर्थ व्यक्त करता है।

हथेली पर सरसो उगाना

- Ans 1. लड़ाई करना
 2. खेती करना
 3. भाग जाना
 4. असंभव काम को संभव करना

Question ID : 65497835820
Status : Answered
Chosen Option : 4

Q.4 उस विकल्प का चयन करें जो निम्न मुहावरे का सही अर्थ व्यक्त करता है।

फूल झड़ना

- Ans 1. प्रिय वचन बोलना
 2. पतझड़ होना
 3. हल्की बातें बोलना
 4. सुन्दर लगना

Question ID : 65497835815
Status : Answered
Chosen Option : 1

Q.5 सही वर्तनी वाले शब्द का चयन करें।

- Ans 1. निरामिष
 2. निरामिश
 3. निर्मिश
 4. निरामिस

Question ID : 65497835816
Status : Answered
Chosen Option : 2

Q.6 रिक्त स्थान की पूर्ति के लिए सबसे उपयुक्त शब्द का चयन करें।

मेरे द्वारा _____ चित्र बैठक में टँगा था।

- Ans 1. चित्रित
 2. लिखित
 3. निर्मित
 4. रचित

Question ID : 65497835811
Status : Answered
Chosen Option : 4

Q.7 दिये गये वाक्यांश के लिए एक सार्थक शब्द का चयन कीजिए।

उसी समय में होने वाला या रहने वाला

- Ans 1. समदर्शी
 2. समसामयिक
 3. सार्वजनिक
 4. सामुदायिक

Question ID : 65497835808
Status : Answered
Chosen Option : 2

Q.8 सही वर्तनी वाले शब्द का चयन करें।

- Ans 1. हसतान्तरित
 2. हस्ततरित
 3. हस्तातरीत
 4. हस्तातरित

Question ID : 65497835817
Status : Answered
Chosen Option : 1

Q.9 दिए गए वाक्य का वह भाग ज्ञात करें जिसमें कोई त्रुटि है। यदि कोई त्रुटि नहीं है, तो 'कोई त्रुटि नहीं है' चुनें।

शत्रु पर (1)/ गोले और तोपों से (2)/ आक्रमण कर दिया गया। (3)/ कोई त्रुटि नहीं है(4)

- Ans 1. 3
 2. 1
 3. 4
 4. 2

Question ID : 65497835806
Status : Answered
Chosen Option : 2

Q.10 दिए गए वाक्य में रेखांकित खंड को प्रतिस्थापित करने के लिए सबसे उपयुक्त विकल्प का चयन करें। यदि इसे प्रतिस्थापित करने की आवश्यकता नहीं है, तो विकल्प 'किसी बदलाव की आवश्यकता नहीं है' का चयन करें।

न जाने क्यों, तुम बेफ़िज़ूल की बातों पर बहस कर लेते हो।

- Ans
- 1. बेफ़िज़ूल में
 - 2. बेफ़िज़ूल की बातों में
 - 3. किसी बदलाव की आवश्यकता नहीं है।
 - 4. फ़िज़ूल की बातों पर

Question ID : 65497835823

Status : Answered

Chosen Option : 3

Q.11 'युद्ध करने की प्रबल इच्छा' इस वाक्यांश के लिए एक सार्थक शब्द दीजिए।

- Ans
- 1. दुर्जेय
 - 2. युयुत्सु
 - 3. युयुत्सा
 - 4. अजातशत्रु

Question ID : 65497835809

Status : Answered

Chosen Option : 2

Q.12 दिए गए वाक्य का वह भाग ज्ञात करें जिसमें कोई त्रुटि है। यदि कोई त्रुटि नहीं है, तो 'कोई त्रुटि नहीं है' चुनें।

संसार की प्राचीन भाषा में (1) सस्कृत प्राचीनतम (2) भाषा मानी जाती है। (3) कोई त्रुटि नहीं है (4)

- Ans
- 1. 3
 - 2. 2
 - 3. 4
 - 4. 1

Question ID : 65497835813

Status : Answered

Chosen Option : 4

Q.13 दिए गए वाक्य में रेखांकित खंड को प्रतिस्थापित करने के लिए सबसे उपयुक्त विकल्प का चयन करें। यदि इसे प्रतिस्थापित करने की आवश्यकता नहीं है, तो विकल्प 'किसी बदलाव की आवश्यकता नहीं है' का चयन करें।

यह बात तुम लोगों के ऊपर निर्भर है।

- Ans
- 1. लोग के ऊपर
 - 2. लोगों पर
 - 3. लोगों के पर
 - 4. किसी बदलाव की आवश्यकता नहीं है।

Question ID : 65497835818

Status : Answered

Chosen Option : 2

Q.14 दिए गए वाक्य में रेखांकित खंड को प्रतिस्थापित करने के लिए सबसे उपयुक्त विकल्प का चयन करें। यदि इसे प्रतिस्थापित करने की आवश्यकता नहीं है, तो विकल्प 'किसी बदलाव की आवश्यकता नहीं है' का चयन करें।

हम दसवी कक्षा के छात्र आपको निवेदन करते हैं।

- Ans
- 1. किसी बदलाव की आवश्यकता नहीं है।
 - 2. हम दसवी कक्षा के छात्र
 - 3. आपसे
 - 4. निवेदन करते हैं

Question ID : 65497835810
Status : Answered
Chosen Option : 3

Q.15 दिए गए शब्द का विलोम चुनें।

अपेक्षा

- Ans
- 1. उपेक्षा
 - 2. सापेक्ष
 - 3. अनापेक्षा
 - 4. निरपेक्ष

Question ID : 65497835819
Status : Answered
Chosen Option : 1

Q.16 दिए गए शब्द का समानार्थी शब्द चुनें-

झगड़ा

- Ans
- 1. खार
 - 2. विरोध
 - 3. बैर
 - 4. द्वन्द्व

Question ID : 65497835822
Status : Answered
Chosen Option : 2

Q.17 'जो पढ़ा न जा सके' वाक्यांश के लिए एक शब्द होगा-

- Ans
- 1. अकथनीय
 - 2. अपठनीय
 - 3. पठित
 - 4. अपठित

Question ID : 65497835825
Status : Answered
Chosen Option : 2

Q.18 विलोम शब्दों का सही युग्म निम्न में से कौन सा है?

- Ans 1. क्रोध - गुस्सा
 2. आस्तिक - नास्तिक
 3. धरा - पृथ्वी
 4. महात्मा - सत

Question ID : 65497835807
Status : Answered
Chosen Option : 2

Q.19 दिए गए शब्द का समानार्थी शब्द बताइए-

हिरन

- Ans 1. गज
 2. मृग
 3. दादुर
 4. केसरी

Question ID : 65497835814
Status : Answered
Chosen Option : 3

Q.20 दिए गए वाक्य का वह भाग ज्ञात करें जिसमें कोई त्रुटि है। यदि कोई त्रुटि नहीं है, तो 'कोई त्रुटि नहीं है' चुनें।

मैंने अपने (1)/ मित्र के नाम क्लर्क को (2)/ एक पत्र लिखाया। (3)/ कोई त्रुटि नहीं है। (4)

- Ans 1. 1
 2. 3
 3. 4
 4. 2

Question ID : 65497835821
Status : Answered
Chosen Option : 4

Comprehension:

दिए गए गद्यांश में से कुछ शब्द हटा दिए गए हैं। संबंधित प्रश्नों में प्रत्येक सख्या के लिए सबसे उपयुक्त विकल्प का चयन कीजिए।

(1) _____ का काम बहुत अशो में (2) _____ के काम से मिलताजुलता है। मधुमक्खिया मकरद सग्रह करने के लिए कोसों के चक्कर लगाती हैं और अच्छे-अच्छे (3) _____ पर बैठकर उनका रस लेती हैं। तभी तो उनके मधु में ससार की सर्वश्रेष्ठ (4) _____ रहती है। यदि आप अच्छे (5) _____ बनाना चाहते हैं तो आपको भी यह वृत्ति ग्रहण करनी चाहिए।

SubQuestion No : 21

Q.21 गद्यांश के रिक्त स्थान (1) के लिए सर्वाधिक उपयुक्त शब्द होगा-

- Ans 1. अभियता
 2. वकील
 3. राजनेता
 4. लेखक

Question ID : 65497835827
Status : Answered
Chosen Option : 4

Comprehension:

दिए गए गद्यांश में से कुछ शब्द हटा दिए गए हैं। सबंधित प्रश्नों में प्रत्येक सख्या के लिए सबसे उपयुक्त विकल्प का चयन कीजिए।

(1) _____ का काम बहुत अशो में (2) _____ के काम से मिलताजुलता है। मधुमक्खिया मकरद सग्रह करने के लिए कोसो के चक्कर लगाती हैं और अच्छे-अच्छे (3) _____ पर बैठकर उनका रस लेती हैं। तभी तो उनके मधु में ससार की सर्वश्रेष्ठ (4) _____ रहती है। यदि आप अच्छे (5) _____ बनाना चाहते हैं तो आपको भी यह वृत्ति ग्रहण करनी चाहिए।

SubQuestion No : 22

Q.22 गद्यांश के रिक्त स्थान (2) के लिए सर्वाधिक उपयुक्त शब्द होगा-

- Ans 1. चींटियो
 2. मधुमक्खियो
 3. पछियो
 4. पशुओ

Question ID : 65497835828

Status : Answered

Chosen Option : 2

Comprehension:

दिए गए गद्यांश में से कुछ शब्द हटा दिए गए हैं। सबंधित प्रश्नों में प्रत्येक सख्या के लिए सबसे उपयुक्त विकल्प का चयन कीजिए।

(1) _____ का काम बहुत अशो में (2) _____ के काम से मिलताजुलता है। मधुमक्खिया मकरद सग्रह करने के लिए कोसो के चक्कर लगाती हैं और अच्छे-अच्छे (3) _____ पर बैठकर उनका रस लेती हैं। तभी तो उनके मधु में ससार की सर्वश्रेष्ठ (4) _____ रहती है। यदि आप अच्छे (5) _____ बनाना चाहते हैं तो आपको भी यह वृत्ति ग्रहण करनी चाहिए।

SubQuestion No : 23

Q.23 गद्यांश के रिक्त स्थान (3) के लिए सर्वाधिक उपयुक्त शब्द होगा-

- Ans 1. टहनियो
 2. फूलो
 3. पेड़ो
 4. पत्तो

Question ID : 65497835829

Status : Answered

Chosen Option : 2

Comprehension:

दिए गए गद्यांश में से कुछ शब्द हटा दिए गए हैं। सबंधित प्रश्नों में प्रत्येक सख्या के लिए सबसे उपयुक्त विकल्प का चयन कीजिए।

(1) _____ का काम बहुत अशो में (2) _____ के काम से मिलताजुलता है। मधुमक्खिया मकरद सग्रह करने के लिए कोसो के चक्कर लगाती हैं और अच्छे-अच्छे (3) _____ पर बैठकर उनका रस लेती हैं। तभी तो उनके मधु में ससार की सर्वश्रेष्ठ (4) _____ रहती है। यदि आप अच्छे (5) _____ बनाना चाहते हैं तो आपको भी यह वृत्ति ग्रहण करनी चाहिए।

SubQuestion No : 24

Q.24 गद्यांश के रिक्त स्थान (4) के लिए सर्वाधिक उपयुक्त शब्द होगा-

- Ans 1. सुदरता
 2. चतुरता
 3. मधुरता
 4. कटुता

Question ID : 65497835830

Status : Answered

Chosen Option : 3

Comprehension:

दिए गए गद्यांश में से कुछ शब्द हटा दिए गए हैं। संबंधित प्रश्नों में प्रत्येक सख्या के लिए सबसे उपयुक्त विकल्प का चयन कीजिए।

(1) _____ का काम बहुत अशो में (2) _____ के काम से मिलताजुलता है। मधुमक्खिया मकरद सग्रह करने के लिए कोसो के चक्कर लगाती है और अच्छे-अच्छे (3) _____ पर बैठकर उनका रस लेती है। तभी तो उनके मधु में ससार की सर्वश्रेष्ठ (4) _____ रहती है। यदि आप अच्छे (5) _____ बनाना चाहते हैं तो आपको भी यह वृत्ति ग्रहण करनी चाहिए।

SubQuestion No : 25

Q.25 गद्यांश के रिक्त स्थान (5) के लिए सर्वाधिक उपयुक्त शब्द होगा-

- Ans 1. समाजसेवी
 2. पुलिस
 3. पत्रकार
 4. लेखक

Question ID : 65497835831

Status : Answered

Chosen Option : 4