

Exam Date	26/11/2021
Exam Time :	9:00 AM - 10:30 AM
Subject	Constable GD 2021

Section : Part A General Intelligence and Reasoning

Study the given pattern carefully and select the number that can replace the question mark (?) in it.

9 12 13
42 98 ?
39 46 80

- Ans 1. 93
 2. 99
 3. 140
 4. 89

Question ID : 65497834961
Status : Answered
Chosen Option : 4

Select the number from among the given options that can replace the question mark (?) in the following series.

2, 4, 16, 256, ?

- Ans 1. 65336
 2. 65536
 3. 65000
 4. 65500

Question ID : 65497834945
Status : Answered
Chosen Option : 2

Read the given statements and conclusions carefully. Assuming that the information given in the statements is true, even if it appears to be at variance with commonly known facts, decide which of the given conclusions logically follow(s) from the statements.

Statements:
Some kites are flights.
All flights are zeppelins.

Conclusions:
1. Some kites are zeppelins.
2. All zeppelins are flights.

- Ans 1. Both the conclusions follow
 2. None of the conclusions follow
 3. Only conclusion 1 follows
 4. Only conclusion 2 follows

Question ID : 65497834960
Status : Answered
Chosen Option : 3

Q.4 Select the option that is related to the third word in the same way as the second word is related to the first word.

Leaves : Chlorophyll :: Blood : ?

- Ans 1. White blood cells
 2. Platelets
 3. Plasma
 4. Haemoglobin

Question ID : 65497834965

Status : Answered

Chosen Option : 4

Q.5 Six friends, Perna, Priyanka, Rahul, Vishal, Tushar and Shruti, are sitting around a circular table, facing the centre of the table. Priyanka is sitting to the immediate left of Tushar. Vishal is sitting to the immediate left of Rahul. Perna is second to the right of Vishal. Perna is sitting between Rahul and Shruti. Who is sitting between Perna and Vishal?

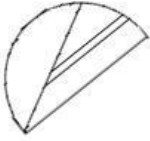
- Ans 1. Priyanka
 2. Rahul
 3. Shruti
 4. Tushar

Question ID : 65497834966

Status : Answered

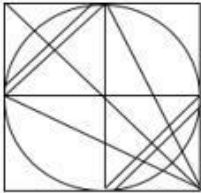
Chosen Option : 2

Q.6 Select the option in which the given figure is embedded (rotation is allowed).

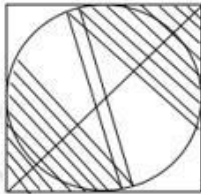


Ans

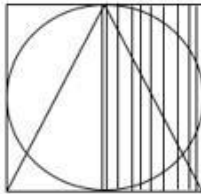
✗ 1.



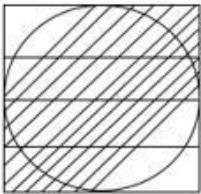
✗ 2.



✓ 3.



✗ 4.

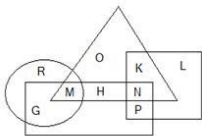


Question ID : 65497834954

Status : Answered

Chosen Option : 3

Q.7 In the following figure, the rectangle represents 'strong', the circle represents 'leather', the triangle represents 'bags', and the square represents 'red'.



Select the letter that represents leather bags which are strong but NOT red coloured.

Ans

1. G

✓ 2. M

3. K

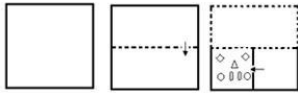
4. N

Question ID : 65497834967

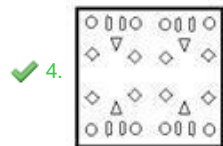
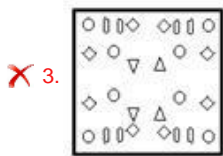
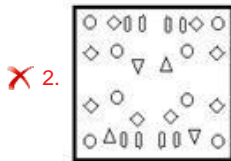
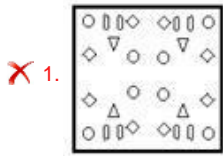
Status : Answered

Chosen Option : 2

Q.8 The sequence of folding a piece of paper and the manner in which the folded paper has been cut is shown in the following figures. How would this paper look when unfolded?



Ans



Question ID : 65497834963

Status : Answered

Chosen Option : 4

Q.9 िनमेश, मेघना का एकलौता भाई है। सुरिभ, िनमेश की बेटी है। मेघना और नेहा बहन ह। मिण, करणका बेटा है, जो िक मेघना का पित है। मिण का सुरिभ से या सबध है?

Ans ✗ 1. पिता

✗ 2. मामा

✗ 3. चाचा

✓ 4. फु फेर भाई

Question ID : 65497834949

Status : Answered

Chosen Option : 4

Q.10 Select the combination of letters that when sequentially placed in the blanks of the given series will complete the series.

s _ r _ k s _ _ c k _ u r c _ s u _ c _

Ans ✗ 1. c, u, c, r, s, k, r, k

✓ 2. u, c, u, r, s, k, r, k

✗ 3. c, u, c, s, r, k, s, k

✗ 4. u, c, u, k, r, s, r, k

Question ID : 65497834956

Status : Answered

Chosen Option : 2

Q.11 A soap costs ₹7 and a pen costs ₹5. Rajesh spent ₹38 and purchased both the things. What was the number of soaps he purchased?

- Ans
- 1. 2
 - 2. 5
 - 3. 4
 - 4. 3

Question ID : 65497834962
Status : Answered
Chosen Option : 3

Q.12 Select the option that is related to the third number in the same way as the second number is related to the first number.

132 : 501 :: 2364 : ?

- Ans
- 1. 5073
 - 2. 4582
 - 3. 9430
 - 4. 3474

Question ID : 65497834951
Status : Answered
Chosen Option : 1

Q.13 Select the letter-cluster from among the given options that can replace the question mark (?) in the following series.

HSI, OLO, VEU, CXA, ?

- Ans
- 1. KPG
 - 2. JPF
 - 3. KQF
 - 4. JQG

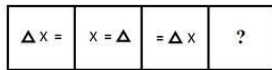
Question ID : 65497834964
Status : Answered
Chosen Option : 4

Q.14 In a certain code language, TRICKY is written as CXLFQH. How will PICNIC be written in that language?

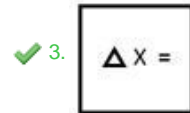
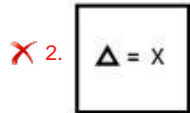
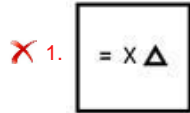
- Ans
- 1. YOFOOL
 - 2. YOFQOL
 - 3. YOEOOL
 - 4. YOEQOL

Question ID : 65497834948
Status : Answered
Chosen Option : 2

Q.15 Select the figure from among the given options that can replace the question mark (?) in the following series.



Ans



Question ID : 65497834958

Status : Answered

Chosen Option : 3

Q.16 Select the number from among the given options that can replace the question mark (?) in the following series.

2, 3, 4, 5, 6, 7, 8, ?, 10, 13, 12, 17, 14

Ans 1. 9

2. 12

3. 10

4. 11

Question ID : 65497834957

Status : Answered

Chosen Option : 4

Q.17 Select the correct option that indicates the arrangement of the given words in a logical and meaningful order.

- i. Ammonification
- ii. Denitrification
- iii. Nitrogen fixation
- iv. Assimilation
- v. Nitrification

Ans 1. iii, v, iv, i, ii

2. v, iii, i, iv, ii

3. iii, v, i, iv, ii

4. v, iii, iv, i, ii


Question ID : 65497834955

Status : Not Answered

Chosen Option : --

Q.18

A box is made by folding the given sheet. In the box so formed, which face will be opposite to the face having  ?



Ans

- ✓ 1. 
- 2. 
- 3. 
- 4. 

Question ID : 65497834953

Status : Answered

Chosen Option : 1

Q.19 Eight persons are sitting in a circle facing the centre. Arush is sitting opposite to Rita. There are two persons sitting between Rakesh and Arush. Ankita is sitting towards the right of Arush and opposite to Urvashi. Anu is sitting between Rita and Urvashi. Ankita is sitting between Rohan and Rakesh. Aman is sitting towards the left of Rohan. Who is sitting between Arush and Urvashi?

- Ans
- ✗ 1. Anu
 - ✗ 2. Ankita
 - ✓ 3. Aman
 - ✗ 4. Rohan

Question ID : 65497834950

Status : Answered

Chosen Option : 3

Q.20 If the signs '+' and '-' are interchanged and the digits '2' and '4' are interchanged, then what will be the value of the following expression?

$$426 \div 648 - 312$$

- Ans
- ✗ 1. 124
 - ✗ 2. 224
 - ✗ 3. 424
 - ✓ 4. 244

Question ID : 65497834952

Status : Answered

Chosen Option : 4

Q.21 Select the correct mirror image of the given combination when the mirror is placed at PQ as shown.

GR8ZEQ |
P
Q

- Ans
- ✗ 1. GR8ZEQ
 - ✗ 2. QZ8R2E
 - ✗ 3. QZ8R2E
 - ✓ 4. QZ8R2E

Question ID : 65497834946

Status : Answered

Chosen Option : 4

Q.22 In a certain code language, TAPE is written as EPAT and LOVE is written as EVOL. How will NITIN be written in the same language?

- Ans
- ✗ 1. TINNI
 - ✗ 2. ITNNI
 - ✗ 3. INNTI
 - ✓ 4. NITIN

Question ID : 65497834944

Status : Answered

Chosen Option : 4

Q.23 Select the option that is related to the third letter-cluster in the same way as the second letter-cluster is related to the first letter-cluster.

CGRT : DJWA :: XUKM : ?

- Ans
- ✗ 1. YXQT
 - ✗ 2. YYPT
 - ✓ 3. YXPT
 - ✗ 4. YYQT

Question ID : 65497834947

Status : Answered

Chosen Option : 3

Q.24 In a certain code language, 'the light house' is written as 'zu chi pin', 'house is big' is written as 'mo tim zu', and 'the big garden' is written as 'riz tim pin'. How will 'light' be written in that language?

- Ans
- ✓ 1. chi
 - ✗ 2. mo
 - ✗ 3. riz
 - ✗ 4. big

Question ID : 65497834959

Status : Answered

Chosen Option : 1

Q.25 Five letters have been given, out of which four are alike in some manner and one is different. Select the letter that is different.

A, D, I, P, R

Ans 1. P

2. D

3. I

4. R

Question ID : 65497834943

Status : Answered

Chosen Option : 4

Section : Part B General Knowledge and General Awareness

Q.1 _____ बिकिंग सचालन का एक विशेष खड है जो डि४यो या सगठनो को पूजी जटाने और उ विवुीय परामश सेवाएँ दान करने म मदद करता है।

Ans 1. वाणिजिक बिकिंग (Commercial banking)

2. निवेश बिकिंग (Investment banking)

3. निगमित विव (Corporate finance)

4. निजी इि टी (Private equity)

Question ID : 65497834974

Status : Answered

Chosen Option : 1

Q.2 भारतीय सिवधान म िन िलिखत म से िकस सवैधािनक सशोधन अधिनयम ारा रा िय राजधानी ेा िदमिी और क5 शािसत देश पदुदु चेरी की विवधानसभाओ को रा पित चुनाव के िलए िनवाचक मडल मजोड़ा गया था?

Ans 1. सिवधान (सकरवा सशोधन) अधिनयम, 1992

2. सिवधान (चौदहवा सशोधन) अधिनयम, 1962

3. सिवधान (साहवा सशोधन) अधिनयम, 1964

4. सिवधान (िछहकरवा सशोधन) अधिनयम, 1994

Question ID : 65497834977

Status : Not Answered

Chosen Option : --

Q.3 Who among the following is the author of the book 'Night of the Restless Spirits: Stories from 1984'?

Ans 1. Khushwant Singh

2. Sarbpreet Singh

3. Vinay Sitapati

4. Chetan Bhagat

Question ID : 65497834972

Status : Answered

Chosen Option : 2

Q.4 Dendron and axon are parts of the:

- Ans 1. excretory system
 2. digestive system
 3. muscular system
 4. nervous system

Question ID : 65497834981
Status : Not Answered
Chosen Option : --

Q.5 In which of the following states is Murlen National Park located?

- Ans 1. Tripura
 2. Nagaland
 3. Mizoram
 4. Assam

Question ID : 65497834969
Status : Answered
Chosen Option : 4

Q.6 In which year was the first cotton mill at Bombay in India set up as a spinning mill?

- Ans 1. 1852
 2. 1853
 3. 1854
 4. 1851

Question ID : 65497834984
Status : Answered
Chosen Option : 2

Q.7 विशिषर कु मार घोष ने भारतीयो म रा ियता की भावना जगाने के उहे4 से 1875 म _____की 5थापना की थी।

- Ans 1. इडयन एसोिसएशन
 2. आय समाज
 3. ई™ इडया एसोिसएशन
 4. इडया लीग

Question ID : 65497834975
Status : Answered
Chosen Option : 3

Q.8 िन िलिखत म से कौन सी एक सघीय सरकार की िवशेषता नही

- है? Ans 1. सिवधान की सव ता
 2. िलिखत सिवधान
 3. एकसदनी िवधाियका
 4. दोहरी सरकार

Question ID : 65497834989
Status : Answered
Chosen Option : 4

Q.9 Which state does the India's woman cricketer Smriti Mandhana hail from?

Ans 1. Maharashtra

2. Gujarat

3. Bihar

4. Goa

Question ID : 65497834968

Status : Answered

Chosen Option : 4

Q.10 Sports Minister Kiren Rijju has launched which edition of the Fit India School Week in January 2021?

Ans 1. 4th

2. 2nd

3. 6th

4. 1st

Question ID : 65497834973

Status : Not Answered

Chosen Option : --

Q.11 कौन से लिखित मसौदा किस आदिभारतीय लेखक को बंगाल में प्रस्तुत करने के नाम से जाना जाता है, जिसे मलयालम भाषा में उपलब्ध कराया गया है?

Ans 1. एसके पोटे ट

2. पे बवदम दीधरन

3. वैकोम मुहंमद बशीर

4. एमटी वासुदेवन नायर

Question ID : 65497834987

Status : Not Answered

Chosen Option : --

Q.12 TX2 लक्ष्य, 2022 तक दुनिया में जगली _____ की संख्या को दोगुना करने के लिए एक विवश्यापी कदम है।

Ans 1. हाथियों

2. शेरों

3. तटुओं

4. बाघों

Question ID : 65497834985

Status : Answered

Chosen Option : 2

Q.13 प्लास्टिक के निम्नलिखित में से किस पेट्रोलियम उत्पाद का उपयोग किया जाता है? Ans 1. अक्रिल

2. कोल गैस

3. कोयला

4. कोक

Question ID : 65497834983

Status : Answered

Chosen Option : 4

Q.14 In economics, what is the full form of GNP?

- Ans 1. Gross Natural Produce
 2. Gross National Product
 3. Great National Produce
 4. Gross Natural Product

Question ID : 65497834986
Status : Answered
Chosen Option : 2

Q.15 In which of the following states is Sirohi /Shirui National Park located?

- Ans 1. West Bengal
 2. Assam
 3. Manipur
 4. Odisha

Question ID : 65497834971
Status : Answered
Chosen Option : 1

Q.16 Charminar, a popular monument and mosque, is located in:

- Ans 1. Delhi
 2. Hyderabad
 3. Chennai
 4. Mumbai

Question ID : 65497834979
Status : Answered
Chosen Option : 2

Q.17 भारत म थम 'गौ कै िबनेट (cow cabinet)' की 5थापना िन िलिखत म से िकस रा म की गई

- है?Ans 1. राज3थान
 2. उकर देश
 3. म देश
 4. िबहार

Question ID : 65497834978
Status : Not Answered
Chosen Option : --

Q.18 In which of the following states is the 'International Cherry Blossom Festival' celebrated annually?

- Ans 1. Punjab
 2. Himachal Pradesh
 3. Meghalaya
 4. Uttarakhand

Question ID : 65497834970
Status : Answered
Chosen Option : 3

Q.19 _____ नदी, पीर पञ्जाल पवतमाला के समानांतर उपर-पि म दिशा म बहती है और कि वाड़ के पास की पवतमाला को काटती है।

- Ans
- 1. सतलुज
 - 2. चेनाब
 - 3. भास
 - 4. रावी

Question ID : 65497834991
Status : Answered
Chosen Option : 2

Q.20 _____ ग्रेडियम की एक दीवार कि के टर रा ल 5 विड़ को समिपत है।

- Ans
- 1. चि चामी
 - 2. अण जेटली
 - 3. जवाहर लाल नेहव
 - 4. वानखेड़े

Question ID : 65497834992
Status : Answered
Chosen Option : 1

Q.21 2020 म 'लोकल फॉर दीवाली' अभियान कि लिखत म से किस मालय ारा आरभ किया

- गया? Ans
- 1. रसायन और उवरक मालय
 - 2. व मालय
 - 3. कोयला मालय
 - 4. आयुष मालय

Question ID : 65497834990
Status : Answered
Chosen Option : 2

Q.22 खाज (एिजमा) रोग का सबध मानव शरीर के कि म से किस भाग से है?

- Ans
- 1. अउथ
 - 2. आँख
 - 3. चा
 - 4. फे फड़े

Question ID : 65497834980
Status : Answered
Chosen Option : 3

Q.23 भारतीय बक आजकल अपनी जमा राशि का _____ तिशत नकदी के प म रखते ह, यह नकदी उन जमाकताओ को भुगतान करने के लिए रखी जाती है जो किसी भी दिन बक से पैसे किनकालने आ सकते ह।

- Ans
- 1. 5
 - 2. 15
 - 3. 20
 - 4. 10

Question ID : 65497834988
Status : Answered
Chosen Option : 3

Q.24 Who is the author of the book 'The Rule Breakers'?

- Ans 1. Satyarth Nayak
 2. Preeti Shenoy
 3. Bibek Debroy
 4. Amitav Ghosh

Question ID : 65497834982
Status : Not Answered
Chosen Option : --

Q.25 Which of the following events was led by Sardar Vallabhbhai Patel?

- Ans 1. Dandi March
 2. Bardoli Satyagraha
 3. Chittagong Armoury Raid
 4. Kakori Conspiracy

Question ID : 65497834976
Status : Answered
Chosen Option : 2

Section : Part C Elementary Mathematics

Q.1 A man walks 600 m in 5 minutes. His speed (in km/h) is:

- Ans 1. 5.6 km/h
 2. 7.2 km/h
 3. 3.8 km/h
 4. 4.6 km/h

Question ID : 65497835006
Status : Answered
Chosen Option : 2

Q.2 The radii of the bases of a cylinder and a cone are in the ratio of 4 : 3 and their heights are in the ratio of 1 : 2. Find the ratio of their volumes.

- Ans 1. 3 : 8
 2. 4 : 5
 3. 8 : 3
 4. 5 : 4

Question ID : 65497835011
Status : Answered
Chosen Option : 3

Q.3 In an election between two candidates, 82% of voters cast their votes, out of which 4% were found to be invalid. The winning candidate got 108240 votes which are 55% of the valid votes. What was the total number of voters who cast their votes in this election?

- Ans 1. 250000
 2. 205000
 3. 200500
 4. 200000

Question ID : 65497835008
Status : Answered
Chosen Option : 2

Q.4 If T denotes the sum of money, M denotes the number of years, P denotes the rate of interest (interest is compounded annually), then the compound interest is given by:

Ans

- ✓ 1. $T(1 + P/100)^M - T$
- 2. $T(1 + P/100)^M$
- 3. $M(1 + T/100)^P - T$
- 4. $M(1 + M/100)^P$

Question ID : 65497835004

Status : Answered

Chosen Option : 2

Q.5 A car runs 40 minutes at a speed of 45 km/h, next 45 minutes at a speed of 60 km/h and $1\frac{1}{2}$ hours at a speed of 50 km/h. The average speed (in km/h) of the car for the whole journey is closest to:

Ans

- ✗ 1. 52.8
- ✗ 2. 52.3
- ✗ 3. 51.9
- ✓ 4. 51.4

Question ID : 65497835016

Status : Answered

Chosen Option : 4

Q.6 The list price of an article is ₹576. It is sold by allowing 20% discount on the list price. If its cost price is ₹480, then what will be the profit/loss percentage?

Ans

- 1. Loss, 2%
- 2. Profit, 4%
- 3. Profit, 2%
- 4. Loss, 4%

Question ID : 65497835013

Status : Answered

Chosen Option : 4

Q.7 The value of $[17 + (8 - 5) \times 5] + (25 - 48 \div 6 + 12 \times 2)$ is:

Ans

- ✓ 1. 73
- ✗ 2. 37
- ✗ 3. 27
- ✗ 4. 122

Question ID : 65497834998

Status : Answered

Chosen Option : 1

Q.8 What is the smallest number which when added to 5 is exactly divisible by 15, 20 and 21?

- Ans 1. 420
 2. 415
 3. 425
 4. 210

Question ID : 65497835007
Status : Answered
Chosen Option : 2

Q.9 एक ऋण दो समान वार्षिक किश्तों में लौटाया जाना है। यदि ब्याज की दर 10% वार्षिक है, जिसकी गणना वार्षिक चक्रवृद्धि आधार पर की जाती है और प्रत्येक किश्त ₹3,872 की है, तो ऋण की राशि (₹ में) कितनी है?

- Ans 1. 7,500
 2. 6,500
 3. 6,720
 4. 7,744

Question ID : 65497834996
Status : Answered
Chosen Option : 3

Q.10 एक वस्तु को 18% की हानि पर बेचा गया। यदि उस वस्तु को ₹2,475 अधिक में बेचा जाता, तो 12% का लाभ प्राप्त होता। वस्तु का विक्रय मूल्य (₹ में) ज्ञात कीजिए।

- Ans 1. 6,765
 2. 7,275
 3. 8,250
 4. 8,000

Question ID : 65497834995
Status : Answered
Chosen Option : 1

Q.11 If $2x + 7y : 4x - 3y :: 8 : 3$, then $x : y$ is:

- Ans 1. 45 : 38
 2. 22 : 37
 3. 45 : 26
 4. 24 : 43

Question ID : 65497835003
Status : Answered
Chosen Option : 3

Q.12 The radii of two circles are 21 cm and 25 cm, respectively. What is the area (in cm^2) of the circle whose circumference is equal to difference of the circumference of the two given circles? (Use $\pi = \frac{22}{7}$) correct to one decimal place.

- Ans
- 1. 49.7
 - 2. 48.9
 - 3. 50.3
 - 4. 52.3

Question ID : 65497834994
Status : Answered
Chosen Option : 3

Q.13 The smallest number to which when 18 is added, the number is exactly divisible by 28, 36 and 45, is:

- Ans
- 1. 1242
 - 2. 280
 - 3. 1000
 - 4. 518

Question ID : 65497835001
Status : Answered
Chosen Option : 1

Q.14 An article is purchased for ₹425 and sold for ₹500. The gain percentage is closest to:

- Ans
- 1. 18.6%
 - 2. 17.65%
 - 3. 16.56%
 - 4. 18%

Question ID : 65497834999
Status : Answered
Chosen Option : 2

Q.15 The average of 26 numbers is 54.5. The average of the first 15 numbers is 58.6 and that of the last 12 numbers is 52. If the 15th number is excluded, the average of the remaining numbers will be:

- Ans
- 1. 57.28
 - 2. 49.24
 - 3. 53.24
 - 4. 50.56

Question ID : 65497835012
Status : Answered
Chosen Option : 3

Q.16 Find the compound interest on ₹8,500 in 2 years at 6% per annum, interest being compounded half-yearly.

- Ans
- 1. ₹1,066.82
 - 2. ₹9,968.72
 - 3. ₹1,050.25
 - 4. ₹1,025.75

Question ID : 65497835010
Status : Answered
Chosen Option : 1

Q.17 A, B and C together can complete a work in 8 days. If A is 50% more efficient than B and B is 50% efficient than C, then B alone will complete the same work in:

- Ans**
1. 16 days
 2. 24 days
 3. 48 days
 4. 36 days

Question ID : 65497835015

Status : Answered

Chosen Option : 4

Q.18 A man sold $\frac{5}{6}$ of his articles at a gain of 15% and the remaining at cost price. Find the gain earned by him in the whole transaction.

- Ans**
1. $9\frac{3}{5}\%$
 2. $12\frac{1}{2}\%$
 3. $15\frac{2}{3}\%$
 4. 7%

Question ID : 65497835017

Status : Answered

Chosen Option : 2

Q.19 एक दुकानदार ₹1,800 तक की खरीद पर 15% की छूट और ₹1,800 से अधिक की खरीद पर 17.5% छूट की घोषणा करता है। अब्दुल ₹8 प्रति पेन की दर से 225 पेन और ₹30 प्रति दर्जन की दर से 4 दर्जन पेंसिलें खरीदता है। अब्दुल द्वारा भुगतान की गई राशि ज्ञात कीजिए।

- Ans**
1. ₹1,580
 2. ₹1,684
 3. ₹1,540
 4. ₹1,584

Question ID : 65497834997

Status : Answered

Chosen Option : 4

Q.20 The ratio of three numbers is 3 : 2 : 5 and the sum of their squares is 8550. Find the sum of the numbers.

- Ans**
1. 150
 2. 172
 3. 225
 4. 75

Question ID : 65497835009

Status : Answered

Chosen Option : 1

Q.21 $\left\{\frac{12}{9-6}\right\} + 8 - \left(\frac{16}{4}\right) - (3 - 5 - 4)$ is equal to:

- Ans
- 1. 24
 - 2. 14
 - 3. 42
 - 4. 35

Question ID : 65497835005
Status : Answered
Chosen Option : 2

Q.22 Ram, who is half as efficient as Krish, will take 12 days to complete a task if he works alone. If Ram and Krish work together, how long will they take to complete the task?

- Ans
- 1. 2 days
 - 2. 4 days
 - 3. 6 days
 - 4. 8 days

Question ID : 65497835000
Status : Answered
Chosen Option : 2

Q.23 In a school total student are only boys and girls. The ratio of boys and girls in a school is 5 : 8. Which of the following could be the total number of students in the school?

- Ans
- 1. 2100
 - 2. 1800
 - 3. 2700
 - 4. 1690

Question ID : 65497834993
Status : Answered
Chosen Option : 4

Q.24 The mean of the first 7 odd prime numbers (correct to two decimal places) is:

- Ans
- 1. 7.34
 - 2. 12.35
 - 3. 10.71
 - 4. 12.45

Question ID : 65497835002
Status : Answered
Chosen Option : 3

Q.25 A, B and C are three numbers. A is 40% less than B and B is 15% less than C. If C is 50% more than D, then A will be less than D by:

- Ans 1. 23.5%
 2. 10.75%
 3. 18.5%
 4. 24.25%

Question ID : 65497835014
Status : Answered
Chosen Option : 1

Section : Part D English

Q.1 Select the most appropriate option to fill in the blank.

He recovered after a _____ illness.

- Ans 1. prolonged
 2. stretched
 3. surprise
 4. projected

Question ID : 65497835026
Status : Answered
Chosen Option : 1

Q.2 Select the most appropriate option that can substitute the underlined segment in the given sentence. If there is no need to substitute it, select 'No substitution required'.

"The players needing a break and we think it's time for them to rest," the coach told the reporters.

- Ans 1. need a break
 2. No substitution required
 3. needs a break
 4. are need a break

Question ID : 65497835019
Status : Answered
Chosen Option : 1

Q.3 Select the most appropriate option to fill in the blank.

The book gives a _____ account of the horrors of war.

- Ans 1. graphic
 2. bu ky
 3. heroic
 4. pleasant

Question ID : 65497835036
Status : Answered
Chosen Option : 1

Q.4 Select the correctly spelt word.

- Ans 1. Restaraunt
 2. Millienum
 3. Maintenance
 4. Refree

Question ID : 65497835030
Status : Answered
Chosen Option : 3

Q.5 The following sentence has been split into four segments. Identify the segment that contains a grammatical error.

Laughing for about ten minutes / continuous each day / is supposed to be / good for your health.

- Ans 1. good for your health
 2. Laughing for about ten minutes
 3. is supposed to be
 4. continuous each day

Question ID : 65497835020
Status : Answered
Chosen Option : 2

Q.6 Select the option that can be used as a one-word substitute for the given group of words.

The art of effective speaking

- Ans 1. Extempore
 2. Allocation
 3. Impromptu
 4. Elocution

Question ID : 65497835029
Status : Answered
Chosen Option : 4

Q.7 Select the most appropriate meaning of the given idiom.

Feel at sea

- Ans 1. To feel lost or confused
 2. To experience sea for the first time
 3. To feel exhausted
 4. To travel always by sea

Question ID : 65497835031
Status : Answered
Chosen Option : 1

Q.8 Select the option that will improve the underlined part of the given sentence. In case no improvement is needed, select 'No improvement required'.

She just completed the work before her friend came.

- Ans
- 1. has just completed the work
 - 2. just has completed the work
 - 3. had just completed the work
 - 4. No improvement required

Question ID : 65497835024
Status : Answered
Chosen Option : 1

Q.9 Select the most appropriate option to fill in the blank.

Edit and proofread your essay _____ times.

- Ans
- 1. less
 - 2. much
 - 3. few
 - 4. several

Question ID : 65497835018
Status : Answered
Chosen Option : 4

Q.10 Select the most appropriate ANTONYM of the given word.

Distinctive

- Ans
- 1. Similarity
 - 2. Common
 - 3. Original
 - 4. Close

Question ID : 65497835035
Status : Answered
Chosen Option : 1

Q.11 Select the correctly spelt word.

- Ans
- 1. Penninsula
 - 2. Pharmacy
 - 3. Domicille
 - 4. Canibal

Question ID : 65497835025
Status : Answered
Chosen Option : 2

Q.12 Select the most appropriate synonym of the given word.

Facility

- Ans 1. Happiness
 2. Fitting
 3. Skill
 4. Luck

Question ID : 65497835021
Status : Answered
Chosen Option : 1

Q.13 Select the option that will improve the underlined part of the given sentence. In case no improvement is needed, select 'No improvement required'.

The strong wind almost lifted me off my feet.

- Ans 1. above my feet
 2. over my feet
 3. against my feet
 4. No improvement required

Question ID : 65497835037
Status : Answered
Chosen Option : 3

Q.14 Select the option that can be used as a one-word substitute for the given group of words.

Not to pay attention to someone or something

- Ans 1. Ignore
 2. Attract
 3. Rebel
 4. Argue

Question ID : 65497835023
Status : Answered
Chosen Option : 1

Q.15 Select the most appropriate ANTONYM of the given word.

Guilty

- Ans 1. Sad
 2. Ignorant
 3. Innocent
 4. Clever

Question ID : 65497835028
Status : Answered
Chosen Option : 3

Q.16 Select the most appropriate synonym of the given word.

Kinship

- Ans 1. Viewership
 2. Partnership
 3. Relationship
 4. Incompatibility

Question ID : 65497835033
Status : Answered
Chosen Option : 2

Q.17 Select the most appropriate meaning of the given idiom.

In the same boat

- Ans 1. Sharing a ride
 2. Having fun
 3. To be calm
 4. In a similar situation

Question ID : 65497835022
Status : Answered
Chosen Option : 4

Q.18 Select the option that can be used as a one-word substitute for the given group of words.

A change which is the result of an act or some cause

- Ans 1. Addition
 2. Affect
 3. Effect
 4. Product

Question ID : 65497835034
Status : Answered
Chosen Option : 3

Q.19 The following sentence has been split into four segments. Identify the segment that contains a grammatical error.

The road was blocked / so we had / to turn back and / find another one route.

- Ans 1. so we had
 2. to turn back and
 3. The road was blocked
 4. find another one route

Question ID : 65497835032
Status : Answered
Chosen Option : 4

Q.20 The following sentence has been split into four segments. Identify the segment that contains a grammatical error.

Has the situation / been favourable, / I would have / attended the marriage.

- Ans 1. been favourable
 2. I would have
 3. Has the situation
 4. attended the marriage

Question ID : 65497835027
Status : Answered
Chosen Option : 2

Comprehension:

In the following passage, some words have been deleted. Read the passage carefully and select the most appropriate option to fill in each blank.

It was a cold, wet January day on (1)_____Tom went back to school. He carried in his pocket (2)_____sugar-candies and a doll for little Laura. The (3)_____was long and boring. Tom wanted to reach as quickly as (4)_____. He couldn't wait to see Laura with the (5)_____smile on her face.

SubQuestion No : 21

Q.21 Select the most appropriate option to fill in blank number 1.

- Ans 1. when
 2. that
 3. which
 4. where

Question ID : 65497835039
Status : Answered
Chosen Option : 3

Comprehension:

In the following passage, some words have been deleted. Read the passage carefully and select the most appropriate option to fill in each blank.

It was a cold, wet January day on (1)_____Tom went back to school. He carried in his pocket (2)_____sugar-candies and a doll for little Laura. The (3)_____was long and boring. Tom wanted to reach as quickly as (4)_____. He couldn't wait to see Laura with the (5)_____smile on her face.

SubQuestion No : 22

Q.22 Select the most appropriate option to fill in blank number 2.

- Ans 1. none
 2. some
 3. much
 4. any

Question ID : 65497835040
Status : Answered
Chosen Option : 2

Comprehension:

In the following passage, some words have been deleted. Read the passage carefully and select the most appropriate option to fill in each blank.

It was a cold, wet January day on (1)_____Tom went back to school. He carried in his pocket (2)_____sugar-candies and a doll for little Laura. The (3)_____was long and boring. Tom wanted to reach as quickly as (4)_____. He couldn't wait to see Laura with the (5)_____smile on her face.

SubQuestion No : 23

Q.23 Select the most appropriate option to fill in blank number 3.

- Ans 1. adventure
 2. passage
 3. visit
 4. journey

Question ID : 65497835041

Status : Answered

Chosen Option : 2

Comprehension:

In the following passage, some words have been deleted. Read the passage carefully and select the most appropriate option to fill in each blank.

It was a cold, wet January day on (1)_____Tom went back to school. He carried in his pocket (2)_____sugar-candies and a doll for little Laura. The (3)_____was long and boring. Tom wanted to reach as quickly as (4)_____. He couldn't wait to see Laura with the (5)_____smile on her face.

SubQuestion No : 24

Q.24 Select the most appropriate option to fill in blank number 4.

- Ans 1. practical
 2. portable
 3. possible
 4. probable

Question ID : 65497835042

Status : Answered

Chosen Option : 3

Comprehension:

In the following passage, some words have been deleted. Read the passage carefully and select the most appropriate option to fill in each blank.

It was a cold, wet January day on (1)_____Tom went back to school. He carried in his pocket (2)_____sugar-candies and a doll for little Laura. The (3)_____was long and boring. Tom wanted to reach as quickly as (4)_____. He couldn't wait to see Laura with the (5)_____smile on her face.

SubQuestion No : 25

Q.25 Select the most appropriate option to fill in blank number 5.

- Ans 1. adorable
 2. reliable
 3. suitable
 4. capable

Question ID : 65497835043

Status : Answered

Chosen Option : 1

Q.1 दिदए गए वा का वह भाग ज्ञात कर िजसम कोई टुटि है। यदि कोई टुटि नही है, तो 'कोई टुटि नही है' चुन।

इस स से (1) और अधिक कहने की (2) आवकता नही है (3) कोई टुटि नही है (4) Ans 1. 4

2. 3

3. 2

4. 1

Question ID : 65497835050

Status : Not Answered

Chosen Option : --

Q.2 दिदए गए वा का वह भाग ज्ञात कर िजसम कोई टुटि है। यदि कोई टुटि नही है, तो 'कोई टुटि नही है' चुन।

उसने बोला िक (1) वह खाना (2) नही खायगे (3) कोई टुटि नही है (4) Ans 1. 4

2. 1

3. 3

4. 2

Question ID : 65497835045

Status : Not Answered

Chosen Option : --

Q.3 र 4 5थान की पूरित के िलए सबसे उपयु 4 श का चयन कर।

हमारे िश क _____ ह।

Ans 1. पुछवाते

2. कहते

3. पूछते

4. पु9ते

Question ID : 65497835049

Status : Not Answered

Chosen Option : --

Q.4 दिदए गये वा ाश के िलए एक श है-

िजसका मूल नही है-

Ans 1. जड़मूल

2. अमूल

3. समूल

4. िनमल

Question ID : 65497835047

Status : Not Answered

Chosen Option : --

Q.5 दिए गए वाक्य में रेखांकित खंड को प्रतिस्थापित करने के लिए सबसे उपयुक्त विकल्प का चयन करें।
यदि इसे प्रतिस्थापित करने की आवश्यकता नहीं है, तो विकल्प 'किसी बदलाव की आवश्यकता नहीं है'
का चयन करें।

युवती ने घबराकर पूछा।

- Ans
- 1. घबराकर पूछी
 - 2. घबराई हुई पूछी
 - 3. घबराई और पूछने लगी
 - 4. किसी बदलाव की आवश्यकता नहीं है।

Question ID : 65497835044

Status : Not Answered

Chosen Option : --

Q.6 दिए गए शब्द का विलोम चुनें।

क्षर

- Ans
- 1. विक्षर
 - 2. साक्षर
 - 3. निरक्षर
 - 4. अक्षर

Question ID : 65497835051

Status : Not Answered

Chosen Option : --

Q.7 उस विकल्प का चयन करें जो निम्न मुहावरे का सही अर्थ व्यक्त करता है।

सब्ज बाग दिखाना

- Ans
- 1. हरियाली दिखाना
 - 2. अच्छी-अच्छी बातें कहकर बहकाना
 - 3. दशा सुधारना
 - 4. अपन सपने सुनाना

Question ID : 65497835048

Status : Not Answered

Chosen Option : --

Q.8 निम्न में से कौन से युग्म में पर्यायवाची शब्द दिए गए हैं?

- Ans
- 1. जय - पराजय
 - 2. हाथी - गज
 - 3. आश्रय - गगनचुम्बी इमारत
 - 4. कुबेर - गद्ध

Question ID : 65497835062

Status : Not Answered

Chosen Option : --

Q.9 'सारे शरीर की हड्डियो का ढाचा' वाक्याश के लिए एक शब्द होगा-

- Ans 1. खोपड़ी
 2. ककाल
 3. जीवाश्म
 4. जजाल

Question ID : 65497835063
Status : Not Answered
Chosen Option : --

Q.10 दिए गए शब्द का विलोम चुनें।

उष्ण

- Ans 1. शीतोष्ण
 2. शीतल
 3. ग्रीष्म
 4. गर्म

Question ID : 65497835055
Status : Not Answered
Chosen Option : --

Q.11 दिये गये वाक्य में रेखांकित अश को प्रतिस्थापित करने के लिए सबसे उपयुक्त विकल्प का चयन करें।

दूध लीटर की नाप से विकता है।

- Ans 1. जाँच
 2. कीमत
 3. माप
 4. तौल

Question ID : 65497835059
Status : Not Answered
Chosen Option : --

Q.12 उस विकल्प का चयन करें जो निम्न मुहावरे का सही अर्थ व्यक्त करता है।

विष उगलना

- Ans 1. क्रोध करना
 2. हानि पहुंचाना
 3. द्वेषपूर्ण बात करना
 4. बुराई का प्रचार करना

Question ID : 65497835056
Status : Not Answered
Chosen Option : --

Q.13 दिए गए शब्द का समानार्थी शब्द निम्न में से कौन सा नहीं है-

गरीब

- Ans
- 1. अकिचन
 - 2. दरिद्र
 - 3. भृत्य
 - 4. कगाल

Question ID : 65497835046
Status : Not Answered
Chosen Option : --

Q.14 सही वर्तनी वाले शब्द का चयन करें।

- Ans
- 1. विदुषी
 - 2. विदुषि
 - 3. वीदुषी
 - 4. विदूषी

Question ID : 65497835054
Status : Not Answered
Chosen Option : --

Q.15 अशुद्ध अक्षर को पहचानिए-

हमें / रविवार को / पिताजी के साथ / बाहर जानी है

- Ans
- 1. हमें
 - 2. बाहर जानी है
 - 3. रविवार को
 - 4. पिताजी के साथ

Question ID : 65497835061
Status : Not Answered
Chosen Option : --

Q.16 रिक्त स्थान की पूर्ति के लिए सबसे उपयुक्त शब्द का चयन करें-

जलसे में _____ लोग थे कि कहीं भी खड़े होने की जगह न थी।

- Ans
- 1. इतने
 - 2. कम
 - 3. कुछ
 - 4. थोड़े

Question ID : 65497835058
Status : Not Answered
Chosen Option : --

Q.17 नीचे दिए वाक्य में रिक्त-स्थान की पूर्ति के लिए सबसे उपयुक्त शब्द का चयन करें।

हवा की _____ में भी सगीत है।

- Ans
- 1. कड़कड़ाहट
 - 2. झनझनाहट
 - 3. घरघराहट
 - 4. सरसराहट

Question ID : 65497835057
Status : Not Answered
Chosen Option : --

Q.18 सही वर्तनी वाले शब्द का चयन करें।

- Ans
- 1. अधयात्मिक
 - 2. आध्यात्मिक
 - 3. अध्यात्मिक
 - 4. अधिआत्मिक

Question ID : 65497835053
Status : Not Answered
Chosen Option : --

Q.19 दिये गये वाक्यांश के लिए एक शब्द दीजिये।

जो कम खर्च करने वाला हो

- Ans
- 1. अव्ययी
 - 2. अतिव्ययी
 - 3. मितव्ययी
 - 4. अल्पव्ययी

Question ID : 65497835052
Status : Not Answered
Chosen Option : --

Q.20 दुष्काल में भूख से मरने की अवस्था हो जाती है।

शब्द समूह के स्थान पर उचित शब्द लिखिए-

- Ans
- 1. निराशाजनक
 - 2. बहुत खाकर
 - 3. भूखमरी
 - 4. निरोगी

Question ID : 65497835060
Status : Not Answered
Chosen Option : --

Comprehension:

दिए गए गद्यांश में से कुछ शब्द हटा दिए गए हैं। संबंधित प्रश्नों में प्रत्येक सख्खा के लिए सबसे उपयुक्त विकल्प का चयन करें।

मोह मन की उस (1) _____ का द्योतक है, जिसमें मनुष्य (2) _____ के कारण सत्य को (3) _____ में (4) _____ हो जाता है। मोह के कारण हमारी चेतना पर ममत्व का (5) _____ चढ़ जाता है।

SubQuestion No : 21

Q.21 गद्यांश के रिक्त स्थान (1) के लिए सर्वाधिक उपयुक्त शब्द होगा-

- Ans 1. दशा
 2. कामना
 3. परिस्थिति
 4. चाहत

Question ID : 65497835065
Status : Not Answered
Chosen Option : --

Comprehension:

दिए गए गद्यांश में से कुछ शब्द हटा दिए गए हैं। संबंधित प्रश्नों में प्रत्येक सख्खा के लिए सबसे उपयुक्त विकल्प का चयन करें।

मोह मन की उस (1) _____ का द्योतक है, जिसमें मनुष्य (2) _____ के कारण सत्य को (3) _____ में (4) _____ हो जाता है। मोह के कारण हमारी चेतना पर ममत्व का (5) _____ चढ़ जाता है।

SubQuestion No : 22

Q.22 गद्यांश के रिक्त स्थान (2) के लिए सर्वाधिक उपयुक्त शब्द होगा-

- Ans 1. भ्रम
 2. कुठा
 3. विवशता
 4. शका

Question ID : 65497835066
Status : Not Answered
Chosen Option : --

Comprehension:

दिए गए गद्यांश में से कुछ शब्द हटा दिए गए हैं। संबंधित प्रश्नों में प्रत्येक सख्खा के लिए सबसे उपयुक्त विकल्प का चयन करें।

मोह मन की उस (1) _____ का द्योतक है, जिसमें मनुष्य (2) _____ के कारण सत्य को (3) _____ में (4) _____ हो जाता है। मोह के कारण हमारी चेतना पर ममत्व का (5) _____ चढ़ जाता है।

SubQuestion No : 23

Q.23 गद्यांश के रिक्त स्थान (3) के लिए सर्वाधिक उपयुक्त शब्द होगा-

- Ans 1. जानने
 2. चुनने
 3. पहचानने
 4. पकड़ने

Question ID : 65497835067
Status : Not Answered
Chosen Option : --

Comprehension:

दिए गए गद्यांश में से कुछ शब्द हटा दिए गए हैं। संबंधित प्रश्नों में प्रत्येक सख्खा के लिए सबसे उपयुक्त विकल्प का चयन करें।

मोह मन की उस (1) _____ का द्योतक है, जिसमें मनुष्य (2) _____ के कारण सत्य को (3) _____ में (4) _____ हो जाता है। मोह के कारण हमारी चेतना पर ममत्व का (5) _____ चढ़ जाता है।

SubQuestion No : 24

Q.24 गद्यांश के रिक्त स्थान (4) के लिए सर्वाधिक उपयुक्त शब्द होगा-

- Ans** 1. निपुण
 2. असमर्थ
 3. मोहासक्त
 4. विवश

Question ID : 65497835068
Status : Not Answered
Chosen Option : --

Comprehension:

दिए गए गद्यांश में से कुछ शब्द हटा दिए गए हैं। संबंधित प्रश्नों में प्रत्येक सख्खा के लिए सबसे उपयुक्त विकल्प का चयन करें।

मोह मन की उस (1) _____ का द्योतक है, जिसमें मनुष्य (2) _____ के कारण सत्य को (3) _____ में (4) _____ हो जाता है। मोह के कारण हमारी चेतना पर ममत्व का (5) _____ चढ़ जाता है।

SubQuestion No : 25

Q.25 गद्यांश के रिक्त स्थान (5) के लिए सर्वाधिक उपयुक्त शब्द होगा-

- Ans** 1. मुखौटा
 2. आवरण
 3. चादर
 4. रग

Question ID : 65497835069
Status : Not Answered
Chosen Option : --

Exam Date	26/11/2021
Exam Time :	12:30 PM - 2:00 PM
Subject	Constable GD 2021

Section : Part A General Intelligence and Reasoning

Q.1 Select the option that is related to the third term in the same way as the second term is related to the first term.

LARGE : NDTJG :: APPLES : ?

- Ans 1. CSROPU
 2. CSROGV
 3. CSORGV
 4. DSROGV

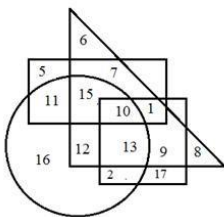
Question ID : 65497831392

Status : Answered

Chosen Option : 2

Q.2

In the following diagram, the circle represents 'Managers', the square represents 'Honest', the rectangle represents 'Females', and the triangle represents 'Rural'.



- The number that represents rural honest managers who are NOT females is:
- Ans 1. 12
 2. 9
 3. 13
 4. 10

Question ID : 65497831398

Status : Answered

Chosen Option : 3

Q.3 In a certain code language, 'FLORA' is written as 'DORII'. How will 'MUSIC' be written in that language?

- Ans 1. FVFPR
 2. GQWQF
 3. FFVRP
 4. GFWQQ

Question ID : 65497831399

Status : Answered

Chosen Option : 3

Q.4 Rajan's family spends 60% of their monthly income on groceries, 12% of their monthly income on room rent, 8% of their monthly income on medical expenses, and the remaining amount of ₹18,000 is savings. What is Rajan's family's monthly income?

- Ans
- 1. ₹80,250
 - 2. ₹90,200
 - 3. ₹90,000
 - 4. ₹80,000

Question ID : 65497831402

Status : Answered

Chosen Option : 3

Q.5 Select the correct mirror image of the given combination when the mirror is placed at PQ as shown.



- Ans
- 1.
 - 2.
 - 3.
 - 4.

Question ID : 65497831411

Status : Answered

Chosen Option : 2

Q.6 Select the option in which the given figure is embedded (rotation is NOT allowed).



- Ans
- 1.
 - 2.
 - 3.
 - 4.

Question ID : 65497831391

Status : Answered

Chosen Option : 3

Q.7 Six friends, G, H I, J, K and L, are sitting around a circular table, facing towards the centre of the table. H is sitting third to the left of G. L and I are not neighbours of H. K is sitting to the immediate right of I. Who is sitting to the immediate left of L?

- Ans 1. J
 2. H
 3. I
 4. G

Question ID : 65497831397

Status : Answered

Chosen Option : 1

Q.8 Select the correct option that indicates the arrangement of the given words in the order in which they appear in an English dictionary.

1. Censored
2. Cerebellum
3. Centripetal
4. Ceremonial
5. Centurion

- Ans 1. 1, 3, 5, 2, 4
 2. 3, 1, 2, 5, 4
 3. 3, 2, 1, 4, 5
 4. 1, 5, 3, 4, 2

Question ID : 65497831404

Status : Answered

Chosen Option : 1

Q.9 Atharv is married to Chetna, who is the only sister of Dilip. Chetna's paternal grandfather is Mukul. Neha is married to Mukul and they have two sons, Hardik and Bhavesh. Hardik is unmarried. Anjali is the daughter-in-law of Neha. Gyan is the son of Dilip and Ekta. How is Chetna related to Gyan?

- Ans 1. Wife
 2. Sister-in-law
 3. Aunt
 4. Daughter-in-law

Question ID : 65497831394

Status : Answered

Chosen Option : 3

Q.10 Eight friends, P, Q, R, S, T, U, V and W, are sitting clockwise around a circular table in the same sequence, facing the centre, at equal distances between them. If U is facing the north-east direction, then who is facing the south direction?

- Ans 1. T
 2. R
 3. S
 4. P

Question ID : 65497831387

Status : Answered

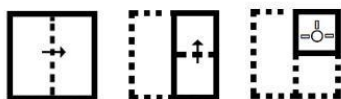
Chosen Option : 4

Q.11 'Lucknow' is related to 'Gomti' in the same way as 'Varanasi' is related to '_____'.
 Question ID : 65497831396

- Ans
- 1. Yamuna
 - 2. Saryu
 - 3. Ganga
 - 4. Godavari

Status : Answered
 Chosen Option : 3

Q.12 The sequence of folding a piece of paper and the manner in which the folded paper has been cut is shown in the following figures. How would this paper look when unfolded?
 Question ID : 65497831403



Ans

- 1.
- 2.
- 3.
- 4.

Status : Answered
 Chosen Option : 2

Q.13 Two different positions of the same dice are shown, the six faces of which are numbered from 1 to 6. Select the number that will be on the face opposite to the face showing '2'.
 Question ID : 65497831390



- Ans
- 1. 5
 - 2. 3
 - 3. 4
 - 4. 1

Status : Answered
 Chosen Option : 1

Q.14 Select the letter-cluster from among the given options that can replace the question mark (?) in the following series.

STGMQ, SGQTM, SQMGT, ?

- Ans
- 1. STQMG
 - 2. SGTQM
 - 3. SMTQG
 - 4. SMQTG

Question ID : 65497831395

Status : Answered

Chosen Option : 1

Q.15 Select the combination of letters that when sequentially placed in the blanks of the given series will complete the series.

TK_TKT_P_K_KPTK_K_TK

- Ans
- 1. P, T, K, P, T, K
 - 2. P, K, T, T, T, P
 - 3. P, K, T, P, K, T
 - 4. P, T, T, K, P, T

Question ID : 65497831405

Status : Answered

Chosen Option : 2

Q.16 In a certain code language, 'POEM' is coded as '63'. How will 'FILE' be coded in that language?

- Ans
- 1. 78
 - 2. 82
 - 3. 80
 - 4. 76

Question ID : 65497831409

Status : Not Answered

Chosen Option : --

Q.17 Four letter-clusters have been given, out of which three are alike in some manner and one is different. Select the letter-cluster that is different.

- Ans
- 1. BQJM
 - 2. ATGN
 - 3. GSHH
 - 4. DEWK

Question ID : 65497831408

Status : Answered

Chosen Option : 4

Q.18 Which two numbers should be interchanged to make the given equation correct?

$$27 + 36 \div 9 \times 15 - 24 = 57$$

- Ans 1. 27 and 24
 2. 27 and 9
 3. 24 and 9
 4. 15 and 9

Question ID : 65497831389
Status : Answered
Chosen Option : 1

Q.19 Study the given pattern carefully and select the number that can replace the question mark (?) in it.

3 16 26
4 20 32
6 28 ?

- Ans 1. 38
 2. 46
 3. 44
 4. 48

Question ID : 65497831401
Status : Answered
Chosen Option : 3

Q.20 Select the number from among the given options that can replace the question mark (?) in the following series.

31, 32, 36, 63, 79, 204, ?

- Ans 1. 220
 2. 202
 3. 204
 4. 240

Question ID : 65497831406
Status : Answered
Chosen Option : 4

Q.21 Select the number from among the given options that can replace the question mark (?) in the following series.

10, 21, 35, 56, 90, 145, 231, 360, ?

- Ans 1. 546
 2. 463
 3. 564
 4. 436

Question ID : 65497831410
Status : Answered
Chosen Option : 1

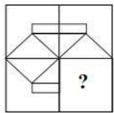
Q.22 Select the option that is related to the fourth number in the same way as the first number is related to the second number and the fifth number is related to the sixth number.

15 : 555 :: ? : 221 :: 17 : 719

- Ans
- 1. 23
 - 2. 11
 - 3. 19
 - 4. 5

Question ID : 65497831388
Status : Answered
Chosen Option : 2

Q.23 Select the figure from among the given options that can replace the question mark (?) and complete the pattern (rotation is NOT allowed).



Ans

- 1.
- 2.
- 3.
- 4.

Question ID : 65497831407
Status : Answered
Chosen Option : 1

Q.24 Read the given statements and conclusions carefully. Assuming that the information given in the statements is true, even if it appears to be at variance with commonly known facts, decide which of the given conclusions logically follow(s) from the statements.

Statements:
Some cars are trains.
Some trains are tractors.

Conclusions:
I. No tractor is a car.
II. No train is a car.
III. Some tractors are cars.

- Ans
- 1. Both conclusions I and II follow
 - 2. All the conclusions follow
 - 3. Either conclusion I or III follows
 - 4. Both conclusions II and III follow

Question ID : 65497831400
Status : Answered
Chosen Option : 3

Q.25 In a certain code language, 'FLOWER' is written as 'KQTSAN'. How will 'WINDOW' be written in that language?

- Ans
- 1. CNSZLS
 - 2. BNSALS
 - 3. BNSZKS
 - 4. BMSAKS

Question ID : 65497831393
Status : Answered
Chosen Option : 3

Section : Part B General Knowledge and General Awareness

Q.1 In which of the following seasons are watermelon, muskmelon etc. produced in India?

- Ans
- 1. Kharif
 - 2. Zaid
 - 3. Rainy
 - 4. Rabi

Question ID : 65497831425
Status : Answered
Chosen Option : 2

Q.2 'Jagoi', an Indian classical dance form, is traditionally from the state of _____.

- Ans
- 1. Punjab
 - 2. Gujarat
 - 3. Karnataka
 - 4. Manipur

Question ID : 65497831412
Status : Not Answered
Chosen Option : --

Q.3 Every bill after being passed by the houses of parliament, either singly or in a joint sitting, is presented to the _____ for his assent.

- Ans
- 1. President
 - 2. Law Minister
 - 3. Chief Justice
 - 4. Prime Minister

Question ID : 65497831419
Status : Answered
Chosen Option : 1

Q.4 The first Economic Survey of India was presented in _____.

- Ans
- 1. 1965-66
 - 2. 1972-73
 - 3. 1948-49
 - 4. 1950-51

Question ID : 65497831436
Status : Answered
Chosen Option : 4

Q.5 Which of the following is an instrument of monetary policy of the Reserve Bank of India?

- Ans 1. Public debt
 2. Tax rate
 3. Government expenditure
 4. Repo rate

Question ID : 65497831416
Status : Answered
Chosen Option : 4

Q.6 Which of the following is NOT a sustainable method of waste management?

- Ans 1. Recycling
 2. Landfill
 3. Burning
 4. Incineration

Question ID : 65497831414
Status : Answered
Chosen Option : 3

Q.7 Who among the following was one of the Indian winners of the Great Immigrants of the Year 2020 award given by the US?

- Ans 1. Deepak Chopra
 2. N kki Haley
 3. Siddhartha Mukherjee
 4. Gita Gopinath

Question ID : 65497831415
Status : Answered
Chosen Option : 4

Q.8 Diego Maradona, the Argentine soccer player who passed away on 25 Nov 2020, is fondly remembered for one memorable goal known as:

- Ans 1. 'Golden hand' goal
 2. 'Silver lining' goal
 3. 'Hand of God' goal
 4. 'Hand of Maradona' goal

Question ID : 65497831435
Status : Answered
Chosen Option : 1

Q.9 With reference to the literature of the medieval Indian period, which of the following pairs is correct?

- Ans 1. Rajatarangini - Bilhana
 2. Prithviraj Raso - Nripatunga
 3. Vikramankadevacharita - Kalhana
 4. Gitagovinda - Jayadeva

Question ID : 65497831418
Status : Answered
Chosen Option : 3

Q.10 Who invented the electric bulb?

- Ans 1. Albert Einstein
 2. Isaac Newton
 3. Thomas Alva Edison
 4. Alexander Graham Bell

Question ID : 65497831434
Status : Answered
Chosen Option : 3

Q.11 Who among the following was the founder of Khudai Khidmatgar, a predominantly Pashtun nonviolent resistance movement known for its activism against the British Raj in colonial India?

- Ans 1. Lala Lajpat Rai
 2. Bal Gangadhar Tilak
 3. Khan Abdul Ghaffar Khan
 4. Subhash Chandra Bose

Question ID : 65497831417
Status : Not Answered
Chosen Option : --

Q.12 The Rajarajeshwara temple at Thanjavur is dedicated to:

- Ans 1. Lord Rama
 2. Lord Ganesha
 3. Lord Krishna
 4. Lord Shiva

Question ID : 65497831432
Status : Answered
Chosen Option : 1

Q.13 Which of the following statements about the Mughal Emperor Babur is INCORRECT?

- Ans 1. He was the first Mughal Emperor.
 2. He succeeded to the throne in 1494.
 3. He was 18 years old when he ascended the throne.
 4. He succeeded to the throne of Ferghana.

Question ID : 65497831430
Status : Answered
Chosen Option : 2

Q.14 In which of the following states is the Similipal National Park located?

- Ans 1. Odisha
 2. Tamil Nadu
 3. Bihar
 4. Maharashtra

Question ID : 65497831423
Status : Answered
Chosen Option : 1

Q.15 In November 2020, the Andaman and Nicobar Command (ANC) conducted a joint services exercise code-named _____ involving the three services components of Andaman and Nicobar Command.

- Ans
- 1. Blue Ribbon
 - 2. Bull Fight
 - 3. Blue Sea
 - 4. Bull Strike

Question ID : 65497831422
Status : Not Answered
Chosen Option : --

Q.16 The term 'Panchsheel' is associated with which of the following options?

- Ans
- 1. Fundamental Duties
 - 2. Composition of NITI Aayog
 - 3. Inter-State Relations
 - 4. Foreign Policy of India

Question ID : 65497831421
Status : Not Answered
Chosen Option : --

Q.17 Which Indian union territory has 'Dugong' as the state animal?

- Ans
- 1. Daman Diu
 - 2. Puducherry
 - 3. Ladakh
 - 4. Andaman Nicobar

Question ID : 65497831429
Status : Answered
Chosen Option : 4

Q.18 Who among the following declares the Minimum Support Price (MSP) for the crops?

- Ans
- 1. Ministry of Rural Development
 - 2. Ministry of Consumer Affairs, Food and Public distribution
 - 3. Ministry of Agriculture and Farmers Welfare
 - 4. Ministry of Food Processing Industries

Question ID : 65497831427
Status : Answered
Chosen Option : 3

Q.19 Lala Lajpat Rai, a nationalist from Punjab, was a member of the _____.

- Ans
- 1. Conservative group
 - 2. Moderate group
 - 3. Radical group
 - 4. Republican group

Question ID : 65497831428
Status : Answered
Chosen Option : 4

Q.20 As of October 2020, how many beaches of India have been awarded the 'Blue Flag Certification'?

- Ans 1. 7
 2. 8
 3. 9
 4. 6

Question ID : 65497831431
Status : Answered
Chosen Option : 2

Q.21 Rice needs _____ to grow.

- Ans 1. moderate temperature and rainfall
 2. high temperature, high humidity and rainfall
 3. moderate temperature and lots of sunshine
 4. high temperature and light rainfall

Question ID : 65497831433
Status : Answered
Chosen Option : 2

Q.22 Which of the following words has been named the '2020 Word of the Year' by Cambridge Dictionary?

- Ans 1. Pandemic
 2. Quarantine
 3. Lockdown
 4. Survive

Question ID : 65497831420
Status : Answered
Chosen Option : 2

Q.23 Which of the following is a characteristic of 'Pteridophytes'?

- Ans 1. They do not have a true vascular tissue containing lignin.
 2. Their lifecycles are dominated by the gametophyte stage.
 3. Their sporophytes are unbranched.
 4. They neither produce flowers or seeds.

Question ID : 65497831413
Status : Not Answered
Chosen Option : --

Q.24 Which of the following was NOT a venue in IPL 2020?

- Ans 1. Sharjah
 2. Muscat
 3. Dubai
 4. Abu Dhabi

Question ID : 65497831426
Status : Not Answered
Chosen Option : --

Q.25 In which of the following states did the Union Minister of Youth Affairs and Sports, Kiren Rijiju virtually inaugurate the 11th Regional Centre of Sports Authority of India in November 2020?

- Ans
- 1. Odisha
 - 2. Assam
 - 3. Kerala
 - 4. Punjab

Question ID : 65497831424
Status : Answered
Chosen Option : 1

Section : Part C Elementary Mathematics

Q.1 A motor boat covers a distance of 24 km upstream in one hour more than the time taken to cover the same distance downstream. If the speed of the current of the river is 2 km/h, then what is the speed (in km/h) of the boat in upstream travel?

- Ans
- 1. 8
 - 2. 6
 - 3. 10
 - 4. 9

Question ID : 65497831450
Status : Not Answered
Chosen Option : --

Q.2 If the retail price of a table is ₹900 and the gain percentages of the manufacturer, the wholesale dealer and the retailer are 8%, 10% and 20%, respectively, then what is the cost of production of the table (rounded off to the integer value)?

- Ans
- 1. ₹869
 - 2. ₹631
 - 3. ₹546
 - 4. ₹750

Question ID : 65497831458
Status : Answered
Chosen Option : 2

Q.3 The value of $\frac{9 \div \{5 - 5 \div (6 - 7) \times 8 + 9\}}{4 + 4 \times 4 \div 4 \text{ of } 4}$ is:

- Ans
- 1. $\frac{1}{10}$
 - 2. $\frac{1}{30}$
 - 3. $\frac{1}{15}$
 - 4. $\frac{1}{90}$

Question ID : 65497831443
Status : Answered
Chosen Option : 2

Q.4 Marked price of an item is ₹800. If a shopkeeper offers two discounts, one of 10% and another of 5% on the item, how much will be the selling price of the item?

- Ans**
1. ₹690
 2. ₹720
 3. ₹562
 4. ₹684

Question ID : 65497831457
Status : Answered
Chosen Option : 4

Q.5 The profit made by selling an article for ₹12,400 is equal to the loss incurred on selling the same article at ₹10,600. What will be the profit per cent if it is sold for ₹14,950?

- Ans**
1. 25
 2. 28
 3. 32
 4. 30

Question ID : 65497831451
Status : Answered
Chosen Option : 4

Q.6 The LCM and HCF of two numbers are 420 and 6, respectively. If sum of the numbers is 102, then what is the difference of the numbers?

- Ans**
1. 22
 2. 42
 3. 18
 4. 60

Question ID : 65497831437
Status : Answered
Chosen Option : 3

Q.7 The volume of a right circular cylinder is 8448 cm^3 and its curved surface area (in cm^2) is $\frac{1}{8}$ of the number representing its volume. What is the height (in cm) of the cylinder?

- Ans**
1. 8.4
 2. 9.1
 3. 11.2
 4. 10.5

Question ID : 65497831461
Status : Answered
Chosen Option : 4

Q.8 15 persons begin to work together on a job, but after some days 6 persons leave. As a result, the job which could have been completed in 42 days is completed in 54 days. After how many days of the commencement of the work did 6 persons leave?

- Ans** 1. 24
 2. 12
 3. 18
 4. 32

Question ID : 65497831449
Status : Not Answered
Chosen Option : --

Q.9 In a right-angled triangle, the right angle is contained between the sides with lengths 14 cm and 48 cm. If it is made to revolve around the longer side, what is the volume of the solid so formed? (Use $\pi = \frac{22}{7}$)

- Ans** 1. 29568 cm³
 2. 2112 cm³
 3. 33792 cm³
 4. 9856 cm³

Question ID : 65497831442
Status : Not Answered
Chosen Option : --

Q.10 The amount obtained by investing a sum of ₹15,000 at 8% p.a. in a certain time is ₹17,496, interest compounded annually. What will be the amount (in ₹) of the same sum at 15% p.a. for the same time, interest compounded 8-monthly?

- Ans** 1. 19,976
 2. 19,965
 3. 19,943
 4. 19,954

Question ID : 65497831460
Status : Not Answered
Chosen Option : --

Q.11 In a college election, the winning secretarial candidate got 69% of the votes and won 342 votes more than his rival. The total number of students in the college is:

- Ans** 1. 800
 2. 900
 3. 750
 4. 1000

Question ID : 65497831448
Status : Answered
Chosen Option : 2

Q.12 The average weight of a certain number of children in a group was 31 kg. If 11 children of average weight 32.5 kg joined the group, then the average weight of all the children would increase by 0.25 kg. The number of children initially in the group was:

- Ans
- 1. 60
 - 2. 50
 - 3. 55
 - 4. 45

Question ID : 65497831446
Status : Not Answered
Chosen Option : --

Q.13 Find the value of $3 + \left(1 + \frac{1}{2} - \{3 - (8 \div 2)\} + \frac{1}{3} + \frac{2}{5}\right)$.

- Ans
- 1. $\frac{187}{30}$
 - 2. $\frac{67}{30}$
 - 3. $\frac{37}{30}$
 - 4. $\frac{125}{30}$

Question ID : 65497831455
Status : Answered
Chosen Option : 1

Q.14 Pipe A is a filling pipe while B and C are emptying pipes. Pipe A alone can fill the tank in 10 hours and pipe B alone can empty two-third part of the tank in 20 hours. If all the three pipes are opened together, the tank is completely filled in 40 hours. In how many hours can C alone empty two-third part of the tank?

- Ans
- 1. 24
 - 2. 12
 - 3. 16
 - 4. 20

Question ID : 65497831445
Status : Answered
Chosen Option : 3

Q.15 A person walking at a speed of 7.2 km/h and crosses a bridge in 25 minutes. Find the length of the bridge (in metres).

- Ans
- 1. 1575
 - 2. 1960
 - 3. 3000
 - 4. 2000

Question ID : 65497831456
Status : Answered
Chosen Option : 3

Q.16 What is the greatest four-digit number which is exactly divisible by 24, 40 and 48?

- Ans
- 1. 9960
 - 2. 9990
 - 3. 9980
 - 4. 9840

Question ID : 65497831453
Status : Answered
Chosen Option : 4

Q.17 From a basket full of eggs, 20% of the eggs broke, 8% were rotten and 24% were kept aside for baking a cake. The remaining 12 eggs were consumed by some people. How many eggs were there in the basket initially?

- Ans
- 1. 25
 - 2. 52
 - 3. 20
 - 4. 48

Question ID : 65497831454
Status : Answered
Chosen Option : 1

Q.18 What is the third proportional to 18, 12?

- Ans
- 1. 7
 - 2. 8
 - 3. $6\sqrt{6}$
 - 4. 9

Question ID : 65497831441
Status : Answered
Chosen Option : 2

Q.19 Amarnath invested a sum of ₹22,500. At what rate of simple interest per annum will he obtain a total amount of ₹28,800 at the end of 4 years?

- Ans
- 1. 7%
 - 2. 6%
 - 3. 5%
 - 4. 4%

Question ID : 65497831440
Status : Answered
Chosen Option : 1

Q.20 A certain sum of money amounts to ₹12,144 at simple interest in 4 years and to ₹13,984 in $6\frac{1}{2}$ years. The rate of interest is:

- Ans
- 1. 9%
 - 2. 8%
 - 3. 10%
 - 4. 6%

Question ID : 65497831452
Status : Not Answered
Chosen Option : --

Q.21 A trader earns a profit of 30% by selling an article X and loses 16% by selling another article Y. If the ratio of the cost prices of X and Y is 3 : 4, then what is the gain/loss in the entire transaction (correct to one decimal place)?

- Ans
- 1. Gain of 3.7%
 - 2. Gain of 4.8%
 - 3. Loss of 4.5%
 - 4. Loss of 3.9%

Question ID : 65497831444
Status : Answered
Chosen Option : 1

Q.22 152 is divided into three parts such that one-fifth of the first part, one-third of the second part and one-eleventh of the third part are equal. What is the sum of the second and the third part?

- Ans
- 1. 112
 - 2. 128
 - 3. 120
 - 4. 64

Question ID : 65497831439
Status : Not Answered
Chosen Option : --

Q.23 The average of 48 numbers is 48. It was found later that observation 48 was wrongly taken as 84 at two places. What is the correct average?

- Ans
- 1. 47.25
 - 2. 46.5
 - 3. 84
 - 4. 49.5

Question ID : 65497831438
Status : Answered
Chosen Option : 1

Q.24 The marked price of an item is ₹15,800. If a shopkeeper earns a profit of 18% after allowing a discount of 20%, then the cost price (in ₹) of the item (nearest to ₹1) is:

- Ans
- 1. 12,640
 - 2. 15,415
 - 3. 13,756
 - 4. 10,712

Question ID : 65497831447
Status : Answered
Chosen Option : 4

Q.25 The incomes of A and B are in the ratio 5 : 7. The expenditure of A is equal to the savings of B. If the total expenditure of A and B is ₹15,750, then their total savings (in ₹) is:

- Ans 1. 11,250
 2. 11,180
 3. 11,200
 4. 11,280

Question ID : 65497831459
Status : Not Answered
Chosen Option : --

Section : Part D English

Q.1 Select the most appropriate ANTONYM of the given word.

Resource

- Ans 1. Property
 2. Reserve
 3. Lack
 4. Source

Question ID : 65497831477
Status : Not Answered
Chosen Option : --

Q.2 Select the most appropriate option that can substitute the underlined word in the given sentence.

She was the only companion Becky could confine in.

- Ans 1. confide
 2. console
 3. confer
 4. content

Question ID : 65497831466
Status : Not Answered
Chosen Option : --

Q.3 Select the most appropriate option that can substitute the underlined segment in the given sentence. If there is no need to substitute it, select 'No substitution required'.

You are ill if you eat all that food.

- Ans 1. have been
 2. will be
 3. were
 4. No substitution required

Question ID : 65497831462
Status : Not Answered
Chosen Option : --

Q.4 Select the option that can be used as a one-word substitute for the given group of words.

A recurrent urge to steal

- Ans 1. Kleptomania
 2. Pyromania
 3. Monomania
 4. Dipsomania

Question ID : 65497831478
Status : Not Answered
Chosen Option : --

Q.5 Select the most appropriate meaning of the given idiom.

To put something on hold

- Ans 1. To cancel something
 2. To procure something
 3. To postpone something
 4. To transfer something

Question ID : 65497831480
Status : Not Answered
Chosen Option : --

Q.6 Select the option that can be used as a one-word substitute for the given group of words.

A person who loves, supports and defends his country

- Ans 1. Dreamer
 2. Lover
 3. Fellow man
 4. Patriot

Question ID : 65497831474
Status : Not Answered
Chosen Option : --

Q.7 Select the option that can be used as a one-word substitute for the given group of words.

The sound a bear makes

- Ans 1. Caw
 2. Bray
 3. Growl
 4. Purr

Question ID : 65497831465
Status : Not Answered
Chosen Option : --

Q.8 The following sentence has been split into four segments. Identify the segment that contains a grammatical error.

Nobody were / allowed into / the containment zones / during the pandemic.

Ans 1. during the pandemic

2. allowed into

3. the containment zones

4. Nobody were

Question ID : 65497831468

Status : Not Answered

Chosen Option : --

Q.9 Select the most appropriate option that can substitute the underlined segment in the given sentence. If there is no need to substitute it, select 'No substitution required'.

Last Sunday I returning home late at night.

Ans 1. No substitution required

2. I returned home

3. I am returning home

4. I had been returning home

Question ID : 65497831472

Status : Not Answered

Chosen Option : --

Q.10 Select the most appropriate option to fill in the blank.

The type of turban worn by Indians _____ from one region to another.

Ans 1. varies

2. originates

3. belongs

4. follows

Question ID : 65497831470

Status : Not Answered

Chosen Option : --

Q.11 Select the most appropriate option to fill in the blank.

_____, he has only himself to blame.

Ans 1. Immediately

2. Accurately

3. Ultimately

4. Happily

Question ID : 65497831481

Status : Not Answered

Chosen Option : --

Q.12 Select the most appropriate synonym of the given word.

Restrain

- Ans 1. Provoke
 2. Control
 3. Force
 4. Encourage

Question ID : 65497831473
Status : Not Answered
Chosen Option : --

Q.13 Select the INCORRECTLY spelt word.

- Ans 1. Termite
 2. Terabyte
 3. Terrestrial
 4. Terminal

Question ID : 65497831479
Status : Not Answered
Chosen Option : --

Q.14 Select the INCORRECTLY spelt word.

- Ans 1. Picnic
 2. Picture
 3. Pickel
 4. Piano

Question ID : 65497831463
Status : Not Answered
Chosen Option : --

Q.15 Select the most appropriate ANTONYM of the given word.

Collect

- Ans 1. Hoard
 2. Compose
 3. Disperse
 4. Confine

Question ID : 65497831467
Status : Not Answered
Chosen Option : --

Q.16 Select the most appropriate synonym of the given word.

Vital

- Ans 1. Hungry
 2. Crucial
 3. Bold
 4. Ambitious

Question ID : 65497831469
Status : Not Answered
Chosen Option : --

Q.17 Parts of the given sentence have been given as options. One of them contains a grammatical error. Select the option that has the error.

A grand celebration in honour of a first woman gold medallist was organised by the family members.

- Ans 1. a first woman gold medallist
 2. by the family members
 3. in honour of
 4. grand celebration

Question ID : 65497831476
Status : Not Answered
Chosen Option : --

Q.18 Select the most appropriate meaning of the given idiom.

At the eleventh hour

- Ans 1. Too late in the night
 2. One hour before noon
 3. At the very last minute
 4. At 11:00 am

Question ID : 65497831475
Status : Not Answered
Chosen Option : --

Q.19 Parts of the given sentence have been given as options. One of them contains a grammatical error. Select the option that has the error.

Children are fond of eating food from Mala aunties small shop at the corner of the street.

- Ans 1. Mala aunties small shop
 2. are fond of
 3. food from
 4. at the corner

Question ID : 65497831471
Status : Not Answered
Chosen Option : --

Q.20 Select the most appropriate option to fill in the blank.

Though he earned meagre wages, he was _____ with his life.

- Ans 1. contented
 2. enthusiastic
 3. irritated
 4. miserable

Question ID : 65497831464
Status : Not Answered
Chosen Option : --

Comprehension:

In the following passage, some words have been deleted. Read the passage carefully and select the most appropriate option to fill in each blank.

Life processes are similar in all animals with (1) _____. So physiologists can find out a lot about the human body by studying animals (2) _____ frogs, rats and rabbits. Sometimes, research involves the death of these animals. But, physiologists take great care to not (3) _____ the animals. The animals are (4) _____ put to sleep during the experiments. It is only by physiological research (5) _____ medicine has been able to advance

SubQuestion No : 21

Q.21 Select the most appropriate option to fill in blank number 1.

- Ans
- 1. backbone
 - 2. the backbones
 - 3. the backbone
 - 4. backbones

Question ID : 65497831483
Status : Not Answered
Chosen Option : --

Comprehension:

In the following passage, some words have been deleted. Read the passage carefully and select the most appropriate option to fill in each blank.

Life processes are similar in all animals with (1) _____. So physiologists can find out a lot about the human body by studying animals (2) _____ frogs, rats and rabbits. Sometimes, research involves the death of these animals. But, physiologists take great care to not (3) _____ the animals. The animals are (4) _____ put to sleep during the experiments. It is only by physiological research (5) _____ medicine has been able to advance

SubQuestion No : 22

Q.22 Select the most appropriate option to fill in blank number 2.

- Ans
- 1. as I ke as
 - 2. as such
 - 3. such as
 - 4. as I ke

Question ID : 65497831484
Status : Not Answered
Chosen Option : --

Comprehension:

In the following passage, some words have been deleted. Read the passage carefully and select the most appropriate option to fill in each blank.

Life processes are similar in all animals with (1) _____. So physiologists can find out a lot about the human body by studying animals (2) _____ frogs, rats and rabbits. Sometimes, research involves the death of these animals. But, physiologists take great care to not (3) _____ the animals. The animals are (4) _____ put to sleep during the experiments. It is only by physiological research (5) _____ medicine has been able to advance

SubQuestion No : 23

Q.23 Select the most appropriate option to fill in blank number 3.

- Ans
- 1. hurt
 - 2. displease
 - 3. damage
 - 4. destroy

Question ID : 65497831485
Status : Not Answered
Chosen Option : --

Comprehension:

In the following passage, some words have been deleted. Read the passage carefully and select the most appropriate option to fill in each blank.

Life processes are similar in all animals with (1) _____. So physiologists can find out a lot about the human body by studying animals (2) _____ frogs, rats and rabbits. Sometimes, research involves the death of these animals. But, physiologists take great care to not (3) _____ the animals. The animals are (4) _____ put to sleep during the experiments. It is only by physiological research (5) _____ medicine has been able to advance

SubQuestion No : 24

Q.24 Select the most appropriate option to fill in blank number 4.

- Ans 1. oddly
 2. strangely
 3. usually
 4. incidentally

Question ID : 65497831486

Status : Not Answered

Chosen Option : --

Comprehension:

In the following passage, some words have been deleted. Read the passage carefully and select the most appropriate option to fill in each blank.

Life processes are similar in all animals with (1) _____. So physiologists can find out a lot about the human body by studying animals (2) _____ frogs, rats and rabbits. Sometimes, research involves the death of these animals. But, physiologists take great care to not (3) _____ the animals. The animals are (4) _____ put to sleep during the experiments. It is only by physiological research (5) _____ medicine has been able to advance

SubQuestion No : 25

Q.25 Select the most appropriate option to fill in blank number 5.

- Ans 1. that
 2. then
 3. than
 4. so

Question ID : 65497831487

Status : Not Answered

Chosen Option : --

Section : Part D Hindi

Q.1 सही वतनी वाले श का चयन कीजिए।

- Ans 1. अर्धिक
 2. अर्धाधिक
 3. अर्धधिक
 4. अर्धीक

Question ID : 65497831489

Status : Answered

Chosen Option : 1

Q.2 दिदए गए वऱ म रडे खऱकित खड को ितऱथऱपित करने के िलए सडसे डपयुऱ िवक का चयन कर। यदि इसे ितऱथऱपित करने की ऱवऱकतऱ नऱी है, तो िवक िकसी डदलऱव की ऱवऱकतऱ नऱी है' का चयन कर।

शरीर पर कई अग होते ह।

- Ans 1. शरीर के
 2. शरीर के भीतर
 3. शरीर की
 4. िकसी डदलऱव की ऱवऱकतऱ नऱी है।

Question ID : 65497831499

Status : Answered

Chosen Option : 2

Q.3 'म' का डपऱडवऱची

- है- Ans 1. मुऱि
 2. रऱजऱ
 3. डीन
 4. डेघ

Question ID : 65497831505

Status : Answered

Chosen Option : 3

Q.4 दिदये गये वऱ ऱऱश के िलए ँक श डीऱजये।

ऱजस डर डडकर िकयऱ गयऱ हो

- Ans 1. उ ऱऱदित
 2. उदधृत
 3. डडकृत
 4. उऱऱण

Question ID : 65497831497

Status : Answered

Chosen Option : 3

Q.5 रऱऱथऱन की डूऱत के िलए सडसे डपयुऱ श का चयन कीऱजए।

ऱडू का िवषैलऱ होता है।

- Ans 1. डक
 2. डन
 3. डश
 4. कऱटना

Question ID : 65497831490

Status : Answered

Chosen Option : 1

Q.6 नीचे दिए गए मुहावरों का अर्थ **D4** करने वाले विकल्प का चयन कीजिए।

हवाई किले बनाना

- Ans
- 1. हवा से किले बनाना
 - 2. हवाई जहाज से किले बनाना
 - 3. माकना करते रहना
 - 4. हवा में किले बनाना

Question ID : 65497831503

Status : Answered

Chosen Option : 3

Q.7 सही बतानी वाले शब्द का चयन कीजिए।

- Ans
- 1. औद्योगीकरण
 - 2. औद्योगिककरण
 - 3. औद्योगीकरण
 - 4. औद्योगिकरण

Question ID : 65497831488

Status : Answered

Chosen Option : 1

Q.8 दिए गए वाक्यों में से खालिकित खंड को चिह्नित करने के लिए सबसे उपयुक्त विकल्प का चयन कर। यदि इसे चिह्नित करने की आवश्यकता नहीं है, तो विकल्प 'किसी बदलाव की आवश्यकता नहीं है' का चयन कर।

धानमाती 15 अगस्त के दिन लाल किले पर झंडा फहराते ह।

- Ans
- 1. लाल किले पर झंडा फहराता ह।
 - 2. लाल किले पर झंडा फहराते है।
 - 3. किसी बदलाव की आवश्यकता नहीं है।
 - 4. लाल किले पर झंडा फहरते ह।

Question ID : 65497831494

Status : Answered

Chosen Option : 3

Q.9 दिए गए वाक्यों का वह भाग ज्ञात कर जिसमें कोई त्रुटि है। यदि कोई त्रुटि नहीं है, तो 'कोई त्रुटि नहीं है' विकल्प को चुन।

लगभग गोपाल जानता है कि उसका पिता बीमार है।

- Ans
- 1. कि उसका पिता
 - 2. लगभग गोपाल जानता है
 - 3. बीमार है
 - 4. कोई त्रुटि नहीं

Question ID : 65497831491

Status : Answered

Chosen Option : 2

Q.10 रिक्त स्थान की पूर्ति के लिए सबसे उपयुक्त विकल्प का चयन करें।

मुझे _____ है कि आप स्वस्थ हो गए हैं।

- Ans 1. हर्ष
 2. आनंद
 3. आह्लाद
 4. उल्लास

Question ID : 65497831507
Status : Answered
Chosen Option : 2

Q.11 नीचे दिए वाक्य में रिक्त-स्थान की पूर्ति के लिए सबसे उपयुक्त शब्द का चयन करें।

झीगुर _____ रहा है।

- Ans 1. झकार
 2. चुकर
 3. कैक
 4. डकार

Question ID : 65497831501
Status : Answered
Chosen Option : 1

Q.12 दिए गए वाक्यांश के लिए एक शब्द चुनें।

जो कई भाषाएँ बोलता हो -

- Ans 1. बहुभाषी
 2. वाचाल
 3. अल्पभाषी
 4. मितभाषी

Question ID : 65497831500
Status : Answered
Chosen Option : 1

Q.13 दिए गए वाक्य का वह भाग ज्ञात करें जिसमें कोई त्रुटि है। यदि कोई त्रुटि नहीं है, तो 'कोई त्रुटि नहीं है' चुनें।

कृपया कार्यालय में सूचित कीजिए कि आपने अपनी स्वेच्छा से अवकाश लिया है।

- Ans 1. कृपया कार्यालय में सूचित कीजिए
 2. कि आपने अपनी स्वेच्छा से
 3. कोई त्रुटि नहीं है।
 4. अवकाश लिया है।

Question ID : 65497831495
Status : Answered
Chosen Option : 2

Q.14 दिए गए वाक्यांश के लिए एक शब्द दीजिए।

जो व्यक्ति किसी के उपकार को मानता हो

- Ans
- 1. कृतघ्न
 - 2. कृतज्ञ
 - 3. कृतकृत्य
 - 4. अकृतज्ञ

Question ID : 65497831493
Status : Answered
Chosen Option : 2

Q.15 'चूना लगाना' मुहावरे का सही अर्थ है-

- Ans
- 1. धोखा देना
 - 2. चोरी करना
 - 3. प्रसन्न करना
 - 4. पान खिलाना

Question ID : 65497831506
Status : Answered
Chosen Option : 1

Q.16 दिए गए वाक्य में रेखांकित खंड को प्रतिस्थापित करने के लिए सबसे उपयुक्त विकल्प का चयन करें।
यदि इसे प्रतिस्थापित करने की आवश्यकता नहीं है, तो विकल्प 'किसी बदलाव की आवश्यकता नहीं है'
का चयन करें।

उसकी परेशानी देखकर मेरा प्राण मुँह को आ गया।

- Ans
- 1. मेरे प्राण मुँह को आ गए।
 - 2. किसी बदलाव की आवश्यकता नहीं है।
 - 3. मेरे प्राण मुँह से आ गए।
 - 4. मेरे प्राण मुँह में आ गया।

Question ID : 65497831498
Status : Answered
Chosen Option : 1

Q.17 दिए गए शब्द का विलोम चुनें।

क्रोध

- Ans
- 1. हिंसा
 - 2. गुस्सा
 - 3. दया
 - 4. क्षमा

Question ID : 65497831492
Status : Answered
Chosen Option : 3

Q.18 दिए गए शब्द के समानार्थी शब्द का चयन करें।

व्योम

- Ans 1. अबक
 2. आकाश
 3. अशु
 4. अि

Question ID : 65497831496

Status : Answered

Chosen Option : 2

Q.19 दिए गए शब्द का विलोम चुनें-

जाति

- Ans 1. विजाति
 2. बिरादरी
 3. जाना-पहचाना
 4. बेजान

Question ID : 65497831502

Status : Answered

Chosen Option : 1

Q.20 दिये गये वाक्य के किस भाग में त्रुटि है?

प्रायः लोग देहिक सुख चाहते हैं।

- Ans 1. प्रायः लोग
 2. देहिक
 3. सुख
 4. चाहते हैं।

Question ID : 65497831504

Status : Answered

Chosen Option : 2

Comprehension:

दिए गए गद्यांश में से कुछ शब्द हटा दिए गए हैं। संबंधित प्रश्नों में प्रत्येक सख्खा के लिए सबसे उपयुक्त विकल्प का चयन करें।

आधुनिक युग (1) _____ उपलब्धियों का युग है। जैसे-जैसे विज्ञान के (2) _____ बढ़ रहे हैं, वैसे-वैसे मानव की उन्नति और समृद्धि का मार्ग प्रशस्त हुआ है। आज का मानव धरती, आकाश और सुदूर (3) _____ के अनेक रहस्यों से अवगत हो चुका है। उसने (4) _____ के उद्भव और विकास से संबंधित नवीनतम व्याख्याएँ प्रस्तुत कर अपने बढ़ते कदमों को उचित (5) _____ प्रदान किया है।

SubQuestion No : 21

Q.21 गद्यांश के रिक्त स्थान (1) के लिए सर्वाधिक उपयुक्त शब्द होगा-

- Ans 1. साहित्यिक
 2. वैज्ञानिक
 3. ऐतिहासिक
 4. दार्शनिक

Question ID : 65497831509

Status : Answered

Chosen Option : 2

Comprehension:

दिए गए गद्यांश में से कुछ शब्द हटा दिए गए हैं। संबंधित प्रश्नों में प्रत्येक सख्या के लिए सबसे उपयुक्त विकल्प का चयन करें।

आधुनिक युग (1) _____ उपलब्धियों का युग है। जैसे-जैसे विज्ञान के (2) _____ बढ़ रहे हैं, वैसे-वैसे मानव की उन्नति और समृद्धि का मार्ग प्रशस्त हुआ है। आज का मानव धरती, आकाश और सुदूर (3) _____ के अनेक रहस्यों से अवगत हो चुका है। उसने (4) _____ के उद्भव और विकास से संबंधित नवीनतम व्याख्याएँ प्रस्तुत कर अपने बढ़ते कदमों को उचित (5) _____ प्रदान किया है।

SubQuestion No : 22

Q.22 गद्यांश के रिक्त स्थान (2) के लिए सर्वाधिक उपयुक्त शब्द होगा-

- Ans 1. कदम
 2. पहल
 3. माँग
 4. फैलाव

Question ID : 65497831510

Status : Answered

Chosen Option : 1

Comprehension:

दिए गए गद्यांश में से कुछ शब्द हटा दिए गए हैं। संबंधित प्रश्नों में प्रत्येक सख्या के लिए सबसे उपयुक्त विकल्प का चयन करें।

आधुनिक युग (1) _____ उपलब्धियों का युग है। जैसे-जैसे विज्ञान के (2) _____ बढ़ रहे हैं, वैसे-वैसे मानव की उन्नति और समृद्धि का मार्ग प्रशस्त हुआ है। आज का मानव धरती, आकाश और सुदूर (3) _____ के अनेक रहस्यों से अवगत हो चुका है। उसने (4) _____ के उद्भव और विकास से संबंधित नवीनतम व्याख्याएँ प्रस्तुत कर अपने बढ़ते कदमों को उचित (5) _____ प्रदान किया है।

SubQuestion No : 23

Q.23 गद्यांश के रिक्त स्थान (3) के लिए सर्वाधिक उपयुक्त शब्द होगा-

- Ans 1. उपकरण
 2. अंतरिक्ष
 3. यातायात
 4. उद्यान

Question ID : 65497831511

Status : Answered

Chosen Option : 2

Comprehension:

दिए गए गद्यांश में से कुछ शब्द हटा दिए गए हैं। संबंधित प्रश्नों में प्रत्येक सख्या के लिए सबसे उपयुक्त विकल्प का चयन करें।

आधुनिक युग (1) _____ उपलब्धियों का युग है। जैसे-जैसे विज्ञान के (2) _____ बढ़ रहे हैं, वैसे-वैसे मानव की उन्नति और समृद्धि का मार्ग प्रशस्त हुआ है। आज का मानव धरती, आकाश और सुदूर (3) _____ के अनेक रहस्यों से अवगत हो चुका है। उसने (4) _____ के उद्भव और विकास से संबंधित नवीनतम व्याख्याएँ प्रस्तुत कर अपने बढ़ते कदमों को उचित (5) _____ प्रदान किया है।

SubQuestion No : 24

Q.24 गद्यांश के रिक्त स्थान (4) के लिए सर्वाधिक उपयुक्त शब्द होगा-

- Ans 1. ब्रह्मांड
 2. आश्रम
 3. आसमान
 4. देवालय

Question ID : 65497831512

Status : Answered

Chosen Option : 1

Comprehension:

दिए गए गद्यांश में से कुछ शब्द हटा दिए गए हैं। संबंधित प्रश्नों में प्रत्येक सख्या के लिए सबसे उपयुक्त विकल्प का चयन करें।

आधुनिक युग (1) _____ उपलब्धियों का युग है। जैसे-जैसे विज्ञान के (2) _____ बढ़ रहे हैं, वैसे-वैसे मानव की उन्नति और समृद्धि का मार्ग प्रशस्त हुआ है। आज का मानव धरती, आकाश और सुदूर (3) _____ के अनेक रहस्यों से अवगत हो चुका है। उसने (4) _____ के उद्भव और विकास से संबंधित नवीनतम व्याख्याएँ प्रस्तुत कर अपने बढ़ते कदमों को उचित (5) _____ प्रदान किया है।

SubQuestion No : 25

Q.25 गद्यांश के रिक्त स्थान (5) के लिए सर्वाधिक उपयुक्त शब्द होगा-

- Ans 1. स्वरूप
 2. अपरूप
 3. महत्व
 4. अधिकार

Question ID : 65497831513

Status : Answered

Chosen Option : 3

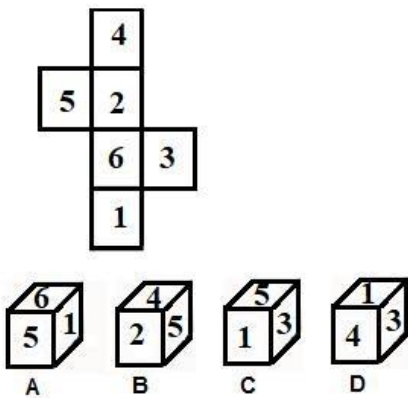
**SSC
GD**

**Previous Year Paper
26 Nov 2021 Shift 3**

Exam Date	26/11/2021
Exam Time :	4:00 PM - 5:30 PM
Subject	Constable GD 2021

Section : Part A General Intelligence and Reasoning

Q.1 Select the dice that can be formed by folding the given sheet along the lines.



- Ans
1. Only A and C
 2. Only A, C and D
 3. Only A
 4. Only A and D

Question ID : 65497828605

Status : Answered

Chosen Option : 4

Q.2 In a certain code language, 'INSPIRE' is written as 'JPTTJZF'. How will 'FORGIVE' be written in that language?

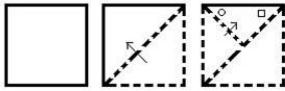
- Ans
1. GQTKJEF
 2. GQRKIDF
 3. GQSKJDF
 4. GQSLIDF

Question ID : 65497828616

Status : Answered

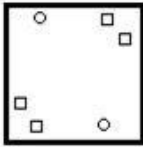
Chosen Option : 3

Q.3 The sequence of folding a piece of paper and the manner in which the folded paper has been cut is shown in the following figures. How would this paper look when unfolded?

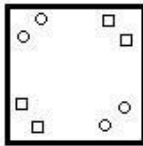


Ans

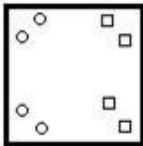
1.



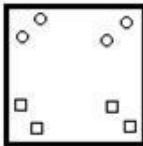
2.



3.



4.



Question ID : 65497828597

Status : Answered

Chosen Option : 2

Q.4 Select the number from among the given options that can replace the question mark (?) in the following series.

21, 32, 54, ?, 131

Ans 1. 72

2. 95

3. 66

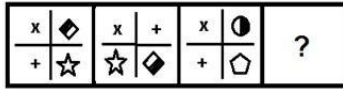
4. 87

Question ID : 65497828613

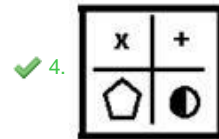
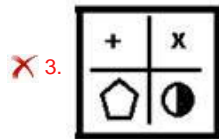
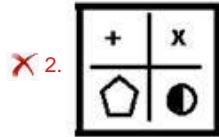
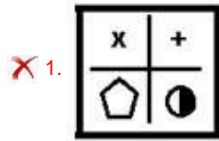
Status : Answered

Chosen Option : 4

Q.5 Select the figure from among the given options that can replace the question mark (?) in the following series.



Ans



Question ID : 65497828614

Status : Answered

Chosen Option : 4

Q.6 Select the option that is related to the third word in the same way as the second word is related to the first word.

Speed : Speedometer :: Air pressure : ?

- Ans
- ✗ 1. Variometer
 - ✗ 2. Altimeter
 - ✗ 3. Hypsometer
 - ✓ 4. Barometer

Question ID : 65497828608

Status : Answered

Chosen Option : 4

Q.7 Six friends, P, Q, R, S, T and U are sitting in two rows, three in each. S is not at the end of any row. T is a neighbour of R. R and U are sitting diagonally opposite to each other. P is second to the left of U. Who among the following three friends are in the same row?

- Ans
- ✗ 1. TQU and PRS
 - ✓ 2. PSU and RTQ
 - ✗ 3. STU and PRQ
 - ✗ 4. PTQ and RSU

Question ID : 65497828609

Status : Answered

Chosen Option : 2

Q.8 Select the letter-cluster from among the given options that can replace the question mark (?) in the following series.

KMQW, HJNT, CEIO, ?

- Ans
- 1. FINT
 - 2. ACGM
 - 3. OQSY
 - 4. IMST

Question ID : 65497828607
Status : Answered
Chosen Option : 2





Q.9 Arunima told Sahil, "Your brother-in-law's only sister's son is my grandson." How is Sahil related to Arunima?

- Ans
- 1. Son-in-law
 - 2. Uncle
 - 3. Son
 - 4. Father-in-law

Question ID : 65497828617
Status : Answered
Chosen Option : 3

Q.10 Select the Venn diagram that best represents the relationship between the following classes.

Grain, Beetroot, Kiwi

- Ans
- 1. 
 - 2. 
 - 3. 
 - 4. 

Question ID : 65497828610
Status : Answered
Chosen Option : 3

Q.11 In a certain code language, 'RAT' is coded as '39' and 'BEAR' is coded as '26'. How will 'SNAKE' be coded in that language?

- Ans
- 1. 50
 - 2. 54
 - 3. 52
 - 4. 48

Question ID : 65497828599
Status : Answered
Chosen Option : 1

Q.12 Select the option in which the numbers are related in the same way as are the numbers in the given set.

(7, 308, 11)

Ans 1. (16, 239, 6)

2. (12, 324, 9)

3. (9, 160, 8)

4. (8, 164, 5)

Question ID : 65497828595

Status : Answered

Chosen Option : 2

Q.13 Select the option that is related to the third number in the same way as the second number is related to the first number.

8 : 104 :: 16 : ?

Ans 1. 300

2. 335

3. 336

4. 320

Question ID : 65497828603

Status : Not Answered

Chosen Option : --

Q.14 Select the option that is related to the third letter-cluster in the same way as the second letter-cluster is related to the first letter-cluster.

HKN : KOS :: MPS : ?

Ans 1. TPX

2. PTW

3. TPW

4. PTX

Question ID : 65497828615

Status : Answered

Chosen Option : 4

Q.15 In a certain code language, 'HORNS' is written as 'SRONH' and 'CRUDE' is written as 'UREDC'. How will 'FACTOR' be written in that language?

Ans 1. TSOC AE

2. TROFCA

3. ACFOTR

4. TROACF

Question ID : 65497828593

Status : Answered

Chosen Option : 4

Q.16 In an organisation consisting of 214 employees, 120 have participated in Clay Modelling and 130 have participated in Poster Making, 36 employees have participated in both Clay Modelling and Poster Making. If each employee has participated in at least one of the two activities, how many employees participated in Poster Making only?

- Ans 1. 80
 2. 90
 3. 84
 4. 94

Question ID : 65497828596
Status : Answered
Chosen Option : 4

Q.17 Select the number from among the given options that can replace the question mark (?) in the following series.

31, 37, 41, 43, ?

- Ans 1. 51
 2. 47
 3. 45
 4. 49

Question ID : 65497828600
Status : Answered
Chosen Option : 4

Q.18 Select the correct option that indicates the arrangement of the given words in the order in which they appear in an English dictionary.

1. Program
2. Problem
3. Proposal
4. Profound
5. Property

- Ans 1. 2, 1, 4, 5, 3
 2. 2, 4, 1, 5, 3
 3. 4, 2, 1, 3, 5
 4. 3, 2, 4, 5, 1

Question ID : 65497828611
Status : Answered
Chosen Option : 2

Q.19 Four letter-clusters have been given, out of which three are alike in some manner and one is different. Select the letter-cluster that is different.

- Ans 1. HQY
 2. HQZ
 3. BKT
 4. DMV

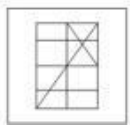
Question ID : 65497828598
Status : Answered
Chosen Option : 1

Q.20 Select the option in which the given figure is embedded (rotation is NOT allowed).



Ans

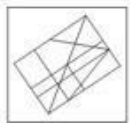
1.




2.



3.



4.



Question ID : 65497828606

Status : Answered

Chosen Option : 2

Q.21 If 'A' denotes 'addition', 'B' denotes 'multiplication', 'C' denotes 'subtraction', and 'D' denotes 'division', then what will be the value of the following expression?

90 D (2 B 5) A 4 B (12 A 10) C 4 B (17 C 10)

Ans 1. 67

2. 61

3. 65

4. 69

Question ID : 65497828604

Status : Answered

Chosen Option : 4

Q.22 Five friends, A, B, C, D and E, are sitting in a straight line. A and B are adjacent to each other. B is between A and C. A is 3rd to the left of D. D is 2nd from the right. Who is sitting 3rd from the left?

Ans 1. D

2. A

3. C

4. E

Question ID : 65497828602

Status : Answered

Chosen Option : 3

Q.23 Read the given statements and conclusions carefully. Assuming that the information given in the statements is true, even if it appears to be at variance with commonly known facts, decide which of the given conclusions logically follow(s) from the statements.

Statements:

1. No girl is a musician.
2. No musician is a teacher.
3. All stars are musicians.

Conclusions:

- I. No star is a girl.
- II. No star is a teacher.

- Ans** 1. Both the conclusions follow
 2. Only conclusion II follows
 3. Only conclusion I follows
 4. None of the conclusions follow

Question ID : 65497828594

Status : Answered

Chosen Option : 1

Q.24 Select the combination of letters that when sequentially placed in the blanks of the given series will complete the series.

Z _ _ U M _ A F _ M _ A _ _ M

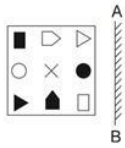
- Ans** 1. FDPZMUF
 2. AFZUFU
 3. DZFUMZA
 4. UADZMFZ

Question ID : 65497828612

Status : Answered

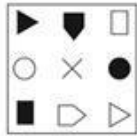
Chosen Option : 2

Q.25 Select the correct mirror image of the given figure when the mirror is placed at 'AB' as shown.




Ans

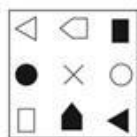
1.




2.



3.



4.



Question ID : 65497828601

Status : Answered

Chosen Option : 3

Section : Part B General Knowledge and General Awareness

Q.1 Curd and vinegar taste sour because they contain_____.

1. chemicals

2. acids

3. proteins

4. yeast

Question ID : 65497828633

Status : Answered

Chosen Option : 2

Q.2 Who among the following is credited with being the 'Pioneer of Rocket Technology' in India?

1. Lord Cornwallis

2. Babar

3. Akbar II

4. Tipu Sultan

Question ID : 65497828638

Status : Answered

Chosen Option : 1

Q.3 Which of the following is the largest west flowing river in Peninsular India?

- Ans 1. Krishna
 2. Kaveri
 3. Narmada
 4. Godavari

Question ID : 65497828618
Status : Not Answered
Chosen Option : --

Q.4 Who inaugurated 'Destination North East 2020', to showcase the region's culture, tourism and heritage?

- Ans 1. Union Minister for Tourism and Culture, Prahlad Singh Patel
 2. Union Minister for Tourism, Dr Jitendra Singh
 3. The Prime Minister, Narendra Modi
 4. Union Home Minister, Amit Shah

Question ID : 65497828635
Status : Not Answered
Chosen Option : --

Q.5 Chhath Puja, the famous traditional festival of India is dedicated to which of the following Gods?

- Ans 1. Moon
 2. Lord Brahma
 3. Sun
 4. Lord Shiva

Question ID : 65497828621
Status : Answered
Chosen Option : 3

Q.6 Who among the following won the Nitto Men's ATP Tour Finals in 2020?

- Ans 1. Dominic Thiem
 2. Novak Djokovic
 3. Daniil Medvedev
 4. Andrey Rublev

Question ID : 65497828626
Status : Not Answered
Chosen Option : --

Q.7 Which Amendment enabled 27% reservation for OBC in government and private educational institutes in 2006?

- Ans 1. 93rd
 2. 77th
 3. 86th
 4. 92nd

Question ID : 65497828631
Status : Answered
Chosen Option : 4

Q.8 In which state was the Forest Martyrs' Memorial inaugurated in November 2020?

- Ans 1. Karnataka
 2. Tamil Nadu
 3. Maharashtra
 4. Andhra Pradesh

Question ID : 65497828642
Status : Not Answered
Chosen Option : --

Q.9 Who among the following Indian actors has been appointed as the state icon of Punjab by the Election Commission of India?

- Ans 1. Amitabh Bachchan
 2. Sonu Sood
 3. Salman Khan
 4. Akshay Kumar

Question ID : 65497828624
Status : Answered
Chosen Option : 2

Q.10 Which of the following states has the highest life expectancy at birth?

- Ans 1. Kerala
 2. Goa
 3. Haryana
 4. Tamil Nadu

Question ID : 65497828619
Status : Answered
Chosen Option : 1

Q.11 When was the All India Tennis Association (AITA) established in India?

- Ans 1. 1912
 2. 1934
 3. 1956
 4. 1920

Question ID : 65497828625
Status : Answered
Chosen Option : 2

Q.12 Who is the author of the book 'Lessons Life Taught Me, Unknowingly'?

- Ans 1. Shilpa Shetty
 2. Anupam Kher
 3. Twinkle Khanna
 4. Javed Akhtar

Question ID : 65497828630
Status : Answered
Chosen Option : 2

Q.13 GDP can be expressed in two different ways, nominal GDP and_____.

- Ans 1. domestic GDP
 2. real GDP
 3. symbolic GDP
 4. calculated GDP

Question ID : 65497828636
Status : Answered
Chosen Option : 2

Q.14_____, built by the Mughal Emperor Shah Jahan in the 17th century, was the main residence of the Mughal Emperors for nearly 200 years.

- Ans 1. Tughlaqabad Fort, Delhi
 2. Siri Fort, Delhi
 3. Red Fort, Delhi
 4. Salimgarh Fort, Delhi

Question ID : 65497828634
Status : Answered
Chosen Option : 3

Q.15 Queen Victoria's Proclamation declared that thereafter India would be governed by and in the name of the British Monarch through a Secretary of State on:

- Ans 1. 27 October, 1858
 2. 1 November, 1858
 3. 12 August, 1858
 4. 16 September, 1860

Question ID : 65497828620
Status : Answered
Chosen Option : 1

Q.16 Kabini is an important tributary of the river:

- Ans 1. Cauvery
 2. Krishna
 3. Mahi
 4. Godavari

Question ID : 65497828637
Status : Answered
Chosen Option : 3

Q.17 In which part of Article 44 of the Constitution of India is the provision for uniform civil code for the citizens contained?

- Ans 1. Part III
 2. Part VI
 3. Part IV
 4. Part II

Question ID : 65497828640
Status : Answered
Chosen Option : 3

Q.18 Who was appointed as the first Chairperson of the Reserve Bank Innovation Hub in November 2020?

- Ans 1. Senapathy (Kris) Gopalakrishnan
 2. TN Manoharan
 3. Rajiv Kumar
 4. Narayan Murthy

Question ID : 65497828622
Status : Not Answered
Chosen Option : --

Q.19 Which of the following is NOT a cold-blooded animal?

- Ans 1. Rabbit
 2. Shark
 3. Crocodile
 4. Frog

Question ID : 65497828628
Status : Answered
Chosen Option : 1

Q.20 The smallest and longest bones in the human body are _____ and _____, respectively.

- Ans 1. stapes, fibula
 2. tibia, femur
 3. stapes, femur
 4. nails, fibula

Question ID : 65497828629
Status : Answered
Chosen Option : 3

Q.21 Who among the following cricketers was the winner of 'ICC ODI Cricketer of the Year Award 2020'?

- Ans 1. Mahendra Singh Dhoni
 2. Virat Kohli
 3. Jasprit Bumrah
 4. Rohit Sharma

Question ID : 65497828641
Status : Answered
Chosen Option : 2

Q.22 Which of the following lakes of India has NOT been added to the Ramsar Sites?

- Ans 1. Chil ka Lake
 2. Keetham Lake
 3. Loktak Lake
 4. Dal Lake

Question ID : 65497828623
Status : Answered
Chosen Option : 2

Q.23 The Buddhist Vihara at Sanchi is also known as 'Great Stupa'. It is one of the most famous Buddhist monuments in India, located at Sanchi town in _____ district.

- Ans
- 1. Jabalpur
 - 2. Raisen
 - 3. Purnia
 - 4. Patna

Question ID : 65497828627
Status : Not Answered
Chosen Option : --

Q.24 Which of the following countries performed its first robotic docking in lunar orbit?

- Ans
- 1. Russia
 - 2. China
 - 3. India
 - 4. Japan

Question ID : 65497828632
Status : Not Answered
Chosen Option : --

Q.25 Which of the following books was written by Banabhatta?

- Ans
- 1. Ashtadhyayi
 - 2. Akbarnama
 - 3. Harshacharita
 - 4. Malavikagnimitram

Question ID : 65497828639
Status : Answered
Chosen Option : 3

Section : Part C Elementary Mathematics

Q.1 The average of the first five multiples of 13 is:

- Ans
- 1. 13
 - 2. 39
 - 3. 65
 - 4. 26

Question ID : 65497828651
Status : Answered
Chosen Option : 2

Q.2 The compound interest compounded annually on a sum of money for 2 years is ₹1,128.6 and the simple interest on the same sum for the same period is ₹1,080. What is the difference between the compound interest compounded annually and the simple interest for 3 years?

- Ans**
1. ₹165.174
 2. ₹170.174
 3. ₹150.174
 4. ₹160.174

Question ID : 65497828663

Status : **Not Attempted and Marked For Review**

Chosen Option : --

Q.3 Two trains of lengths 120 m and 180 m are travelling in opposite directions at the uniform speed of 34 km/h and 32 km/h. The time taken by the two trains to pass each other is:

- Ans**
- ✓ 1. 180/11 sec
 - ✗ 2. 17 sec
 - ✗ 3. 15.5 sec
 - ✗ 4. 16 sec

Question ID : 65497828659

Status : **Answered**

Chosen Option : 1

Q.4 A person purchased a machine for ₹50,000 and fixed the marked price 20% higher than the cost price and sold it at a discount of 15%. The percentage profit or loss is:

- Ans**
- ✗ 1. 1% loss
 2. 2.5% profit
 - ✗ 3. 4% loss
 4. 2% profit

Question ID : 65497828656

Status : **Answered**

Chosen Option : 4

Q.5 If $P = a^3 \times b^5 \times c^{11}$, $Q = a^8 \times b^9 \times c^5$, $R = a^{15} \times c^{23}$, then what is the HCF of P, Q and R?

- Ans**
1. $a^3 \times c^5$
 2. $a^{15} \times b^9 \times c^{23}$
 - ✗ 3. $a \times c$
 4. $a^{26} \times b^{14} \times c^{39}$

Question ID : 65497828643

Status : **Answered**

Chosen Option : 1

Q.6 A sum fetched a total simple interest of ₹5,427 at the rate of 9% p.a. in 6 years. What is the sum?

- Ans
1. ₹54,010
 2. ₹10,050
 3. ₹10,002
 4. ₹54,270

Question ID : 65497828653
Status : Answered
Chosen Option : 2

Q.7 A's income is 25% more than that of B. B's income is less than A's income in percentage of:

- Ans
1. 15%
 2. 20%
 3. 11%
 4. 18%

Question ID : 65497828657
Status : Answered
Chosen Option : 2

Q.8 ₹13,540 is to be divided between Kamal and Sunita such that Kamal's share at the end of 5 years may be equal to Sunita's share at the end of 7 years. If the rate of interest is 8% per annum compounded annually, then Kamal's share is:

- Ans
1. ₹7,280
 2. ₹7,290
 3. ₹8,240
 4. ₹7,390

Question ID : 65497828647
Status : Not Answered
Chosen Option : --

Q.9 The value of $\frac{1}{2}$ of $\frac{1}{3} - \frac{2}{3}$ of $\frac{4}{5} + 4 \div 7 + 3$ of $7 \div 2$ is:

- Ans
1. $\frac{1124}{105}$
 2. $\frac{1024}{105}$
 3. $\frac{1104}{105}$
 4. $\frac{1224}{105}$

Question ID : 65497828660
Status : Answered
Chosen Option : 1

Q.10 The perimeter of a square is 64 cm . The area of a rectangle is 16 cm^2 less than the area of the square. If the length of the rectangle is 20 cm , what is the perimeter of the rectangle?

- Ans
- 1. 12 cm
 - 2. 15 cm
 - 3. 18 cm
 - 4. 64 cm

Question ID : 65497828664
Status : Answered
Chosen Option : 4

Q.11 The value of $2 \times 7 \div 14$ of $4 - 5 \div 4 \times (9 - 11) + 2 - 2 \times 6 \div 8$ of 3 , is:

- Ans
- 1. $3\frac{1}{2}$
 - 2. $4\frac{1}{4}$
 - 3. $2\frac{1}{2}$
 - 4. $4\frac{3}{4}$

Question ID : 65497828665
Status : Not Attempted and Marked For Review
Chosen Option : --

Q.12 What is the greatest number which leaves the same remainder in each case, when divides 265, 580 and 825?

- Ans
- 1. 35
 - 2. 55
 - 3. 25
 - 4. 45

Question ID : 65497828650
Status : Not Attempted and Marked For Review
Chosen Option : --

Q.13 A driver drives a car at a uniform speed of 60 km/h and reaches the 330 km destination by 30 min late. To reach on time, the % increase in speed will be:

- Ans
- 1. 15%
 - 2. 10%
 - 3. 12%
 - 4. 20%

Question ID : 65497828658
Status : Answered
Chosen Option : 2

Q.14 A train moves at a speed of 70 km/h for 5 hours and stops at station 'A'. From station 'A', the train moves to station 'B' at a speed of 66 km/h for 3 hours. What is the total distance covered by the train?

- Ans
- 1. 520 km
 - 2. 548 km
 - 3. 500 km
 - 4. 480 km

Question ID : 65497828661
Status : Answered
Chosen Option : 2

Q.15 Two-third of the loss of A is equal to five-seventh of the profit of B. If the loss of A is ₹2,460, then how much (correct to 2 decimal places) percentage of the profit of B is the loss of A?

- Ans
- 1. 107.27%
 - 2. 107.14%
 - 3. 93.67%
 - 4. 93.33%

Question ID : 65497828644
Status : Answered
Chosen Option : 4

Q.16 If $0.45 : x :: 3 : 8$, then x is equal to:

- Ans
- 1. 1.3
 - 2. 1.2
 - 3. 1.4
 - 4. 2.2

Question ID : 65497828648
Status : Answered
Chosen Option : 2

Q.17 There are three numbers such that the first number is 3 times the second number and the second number is half of the third number. Their average is 60. The third number is:

- Ans
- 1. 120
 - 2. 60
 - 3. 30
 - 4. 90

Question ID : 65497828655
Status : Answered
Chosen Option : 2

Q.18 A can complete $\frac{3}{8}$ of a certain work in 9 days and B can complete 80% of the same work in 16 days. Both work together for 5 days. C alone completes the remaining work in $6\frac{1}{2}$ days. A and C together will complete the whole work in:

- Ans
1. 9 days
 2. 10 days
 3. 8 days
 4. 6 days

Question ID : 65497828667
Status : Answered
Chosen Option : 3

Q.19 A person purchased a refrigerator for ₹18,000. After two years, he spent ₹2,500 on its repair and sold it for ₹12,300. The percentage loss is:

- Ans
1. 42%
 2. 46%
 3. 40%
 4. 44%

Question ID : 65497828654
Status : Answered
Chosen Option : 3

Q.20 A pond is 50 m long, 25 m wide and 4 m deep. Find the capacity of the pond (in m^3).

- Ans
1. 4000
 2. 500
 3. 5000
 4. 2500

Question ID : 65497828649
Status : Answered
Chosen Option : 3

Q.21 A boy who is 7 feet tall can cast a shadow that is 21 feet long on the ground. How tall (in feet) is a man who can cast a shadow that is 15 feet long?

- Ans
1. 6.5
 2. 5.5
 3. 6
 4. 5

Question ID : 65497828652
Status : Answered
Chosen Option : 4

Q.22 The difference between the selling prices of an article sold at a discount of $14\frac{1}{2}\%$ and $10\frac{1}{2}\%$ is 48. If the marked price is 25% more than the cost price, then the cost price of the article is:

- Ans**
1. ₹860
 2. ₹950
 3. ₹920
 4. ₹960

Question ID : 65497828645
Status : Answered
Chosen Option : 4

Q.23 By selling an article for ₹340, a trader loses 20%. To gain 15%, he must sell it for:

- Ans**
1. ₹488.75
 2. ₹475.50
 3. ₹455.75
 4. ₹517.50

Question ID : 65497828666
Status : Answered
Chosen Option : 1

Q.24 Some articles are sold in such a way that the cost price of 60% of the articles is equal to the selling price of 40% of the articles. The profit percentage is:

- Ans**
1. 35
 2. 40
 3. 45
 4. 50

Question ID : 65497828646
Status : Answered
Chosen Option : 4

Q.25 Rohith and Manoj together have ₹1,320. If $\frac{10}{21}$ of Rohith's amount equals to $\frac{5}{7}$ of Manoj's amount, how much amount does Rohith have?

- Ans**
1. ₹320
 2. ₹328
 3. ₹792
 4. ₹980

Question ID : 65497828662
Status : Not Answered
Chosen Option : --

Q.1 Select the most appropriate ANTONYM of the given word.

Monumental

- Ans 1. Mysterious
 2. Insignificant
 3. Important
 4. Enormous

Question ID : 65497828678

Status : Answered

Chosen Option : 4

Q.2 Select the option that can be used as a one-word substitute for the given group of words.

A large cage, building or enclosure for keeping birds in

- Ans 1. Aviary
 2. Apiary
 3. Asylum
 4. Aquarium

Question ID : 65497828674

Status : Answered

Chosen Option : 1

Q.3 Select the most appropriate option to fill in the blank.

The police later_____that one of the thieves had been arrested.

- Ans 1. abandoned
 2. confirmed
 3. commenced
 4. analysed

Question ID : 65497828671

Status : Answered

Chosen Option : 2

Q.4 Select the option that can be used as a one-word substitute for the given group of words.

A system of society or government in which men hold the power and women are largely excluded from it

- Ans 1. Matriarchy
 2. Masculinity
 3. Patrilineal
 4. Patriarchy

Question ID : 65497828681

Status : Answered

Chosen Option : 4

Q.5 Select the INCORRECTLY spelt word.

- Ans 1. Nineteen
 2. Neutrelise
 3. Noun
 4. Nationalise

Question ID : 65497828682
Status : Answered
Chosen Option : 2

Q.6 Select the most appropriate meaning of the given idiom.

In the long run

- Ans 1. Immediately
 2. Occasionally
 3. Ultimately
 4. Regularly

Question ID : 65497828670
Status : Answered
Chosen Option : 3

Q.7 Select the most appropriate option to fill in the blank.

There are various legends associated with the _____ of the state of Kerala.

- Ans 1. source
 2. basis
 3. root
 4. origin

Question ID : 65497828676
Status : Not Answered
Chosen Option : --

Q.8 Select the most appropriate SYNONYM of the given word.

Lure

- Ans 1. Attack
 2. Amend
 3. Attract
 4. Arise

Question ID : 65497828686
Status : Answered
Chosen Option : 3

Q.9 Parts of the given sentence have been given as options. One of them contains a grammatical error. Select the option that has the error.

Educational institutions have been notify to open from 17th November for higher semester students who are engaged in research.

- Ans
- 1. open from
 - 2. are engaged
 - 3. have been notify
 - 4. for higher semester students

Question ID : 65497828679
Status : Answered
Chosen Option : 3

Q.10 Select the most appropriate option that can substitute the underlined segment in the given sentence. If there is no need to substitute it, select 'No substitution required'.

I started early from office, lest I should not get caught in the rain.

- Ans
- 1. lest I will not get caught
 - 2. lest that I get caught
 - 3. No substitution required'
 - 4. lest I should get caught

Question ID : 65497828684
Status : Answered
Chosen Option : 4

Q.11 Select the most appropriate option to fill in the blank.

My classmate is _____ of my achievement.

- Ans
- 1. jealous
 - 2. bitter
 - 3. zealous
 - 4. sad

Question ID : 65497828677
Status : Answered
Chosen Option : 1

Q.12 Select the most appropriate synonym of the given word.

Desert

- Ans
- 1. Help
 - 2. Support
 - 3. Abandon
 - 4. Stay

Question ID : 65497828669
Status : Answered
Chosen Option : 3

Q.13 The following sentence has been divided into parts. One of them may contain an error. Select the part that contains the error from the given options. If you don't find any error, mark 'No error' as your answer.

He want / to have / some more rice.

- Ans 1. He want
 2. No error
 3. to have
 4. some more rice

Question ID : 65497828668
Status : Answered
Chosen Option : 1

Q.14 Select the most appropriate option that can substitute the underlined segment in the given sentence. If there is no need to substitute it, select 'No substitution required'.

I am living in this city for several years but have never experienced any discrimination.

- Ans 1. had lived
 2. No substitution required'
 3. was lived
 4. have lived

Question ID : 65497828683
Status : Answered
Chosen Option : 2

Q.15 Select the most appropriate ANTONYM of the given word.

Tropical

- Ans 1. Cold
 2. Lush
 3. Equatorial
 4. Sultry

Question ID : 65497828680
Status : Answered
Chosen Option : 1

Q.16 Select the option that can be used as a one-word substitute for the given group of words.

Fit to be eaten

- Ans 1. Tasty
 2. Delicious
 3. Potable
 4. Edible

Question ID : 65497828687
Status : Answered
Chosen Option : 4

Q.17 The following sentence has been split into four segments. Identify the segment that contains a grammatical error.

He has been talking / since two hours / and is still / not tired.

- Ans 1. He has been ta king
 2. since two hours
 3. not tired
 4. and is still

Question ID : 65497828685
Status : Answered
Chosen Option : 2

Q.18 Select the most appropriate meaning of the given idiom.

Monkey business

- Ans 1. Dealing in the supply of monkeys
 2. Actions that imitate other animals
 3. Carrying out business related to monkeys
 4. Behaviour that is not acceptable or is dishonest

Question ID : 65497828673
Status : Answered
Chosen Option : 4

Q.19 Select the most appropriate option that can substitute the underlined word in the given sentence.

In India, there are not enough job employability.

- Ans 1. invincibility
 2. productivities
 3. profitability
 4. opportunities

Question ID : 65497828672
Status : Answered
Chosen Option : 4

Q.20 Select the INCORRECTLY spelt word.

- Ans 1. Exclaim
 2. Express
 3. Comunity
 4. Array

Question ID : 65497828675
Status : Answered
Chosen Option : 3

Comprehension:

In the following passage, some words have been deleted. Read the passage carefully and select the most appropriate option to fill in each blank.

The predominantly deltaic eastern coastal plain is an area of deep sedimentation. Over (1) _____ of its length it is considerably wider (2) _____ the plain on the western coast. (3) _____ major deltas, from south to north, (4) _____ of the Kaveri, the Krishna-Godavari, the Mahanadi, and the Ganges-Brahmaputra rivers. The last of (5) _____ is some 190 miles (300 km) wide, but only about one-third of it lies within India.

SubQuestion No : 21

Q.21 Select the most appropriate option to fill in blank no. 1.

- Ans 1. more
 2. many
 3. maximum
 4. most

Question ID : 65497828689

Status : Answered

Chosen Option : 4

Comprehension:

In the following passage, some words have been deleted. Read the passage carefully and select the most appropriate option to fill in each blank.

The predominantly deltaic eastern coastal plain is an area of deep sedimentation. Over (1) _____ of its length it is considerably wider (2) _____ the plain on the western coast. (3) _____ major deltas, from south to north, (4) _____ of the Kaveri, the Krishna-Godavari, the Mahanadi, and the Ganges-Brahmaputra rivers. The last of (5) _____ is some 190 miles (300 km) wide, but only about one-third of it lies within India.

SubQuestion No : 22

Q.22 Select the most appropriate option to fill in blank no. 2.

- Ans 1. then
 2. there
 3. than
 4. that

Question ID : 65497828690

Status : Answered

Chosen Option : 3

Comprehension:

In the following passage, some words have been deleted. Read the passage carefully and select the most appropriate option to fill in each blank.

The predominantly deltaic eastern coastal plain is an area of deep sedimentation. Over (1) _____ of its length it is considerably wider (2) _____ the plain on the western coast. (3) _____ major deltas, from south to north, (4) _____ of the Kaveri, the Krishna-Godavari, the Mahanadi, and the Ganges-Brahmaputra rivers. The last of (5) _____ is some 190 miles (300 km) wide, but only about one-third of it lies within India.

SubQuestion No : 23

Q.23 Select the most appropriate option to fill in blank no. 3

- Ans 1. Specific
 2. The
 3. Few
 4. Such

Question ID : 65497828691

Status : Answered

Chosen Option : 2

Comprehension:

In the following passage, some words have been deleted. Read the passage carefully and select the most appropriate option to fill in each blank.

The predominantly deltaic eastern coastal plain is an area of deep sedimentation. Over (1) _____ of its length it is considerably wider (2) _____ the plain on the western coast. (3) _____ major deltas, from south to north, (4) _____ of the Kaveri, the Krishna-Godavari, the Mahanadi, and the Ganges-Brahmaputra rivers. The last of (5) _____ is some 190 miles (300 km) wide, but only about one-third of it lies within India.

SubQuestion No : 24

Q.24 Select the most appropriate option to fill in blank no. 4.

- Ans 1. are
 2. had been
 3. were
 4. have been

Question ID : 65497828692

Status : Answered

Chosen Option : 1

Comprehension:

In the following passage, some words have been deleted. Read the passage carefully and select the most appropriate option to fill in each blank.

The predominantly deltaic eastern coastal plain is an area of deep sedimentation. Over (1) _____ of its length it is considerably wider (2) _____ the plain on the western coast. (3) _____ major deltas, from south to north, (4) _____ of the Kaveri, the Krishna-Godavari, the Mahanadi, and the Ganges-Brahmaputra rivers. The last of (5) _____ is some 190 miles (300 km) wide, but only about one-third of it lies within India.

SubQuestion No : 25

Q.25 Select the most appropriate option to fill in blank no. 5.

- Ans 1. this
 2. that
 3. them
 4. whom

Question ID : 65497828693

Status : Answered

Chosen Option : 3

Section : Part D Hindi

Q.1 नीचे दिए गए मर 4-5थान भरने के लिए सबसे उपयुक्त शब्द का चयन कर।

रात को उमड़ो के _____ की आवाज़ आ रही थी।

- Ans 1. घुघुआने
 2. कूजने
 3. टराने
 4. रकने

Question ID : 65497828708

Status : Not Answered

Chosen Option : --

Q.2 विलोम शब्दों के सही युग्म का चयन करें:

- Ans
- 1. भय - डर
 - 2. शरीर - देह
 - 3. न कहने योग्य - अकथ
 - 4. आदि - अत

Question ID : 65497828711
Status : Not Answered
Chosen Option : --

Q.3 दिए गए वाक्य में रेखांकित खंड को प्रतिस्थापित करने के लिए सबसे उपयुक्त विकल्प का चयन करें।
यदि इसे प्रतिस्थापित करने की आवश्यकता नहीं है, तो विकल्प 'किसी बदलाव की आवश्यकता नहीं है'
का चयन करें।

वह नहीं समझेगा इसलिए वह मूर्ख है।

- Ans
- 1. इसके कारण
 - 2. क्योंकि
 - 3. अतः
 - 4. किसी बदलाव की आवश्यकता नहीं है।

Question ID : 65497828696
Status : Not Answered
Chosen Option : --

Q.4 रिक्त स्थान भरने के लिए सबसे उपयुक्त शब्द का चयन करें-

उनकी आपस में _____ हो गई।

- Ans
- 1. लबझड़
 - 2. खटपट
 - 3. फटफट
 - 4. गड़बड़

Question ID : 65497828698
Status : Not Answered
Chosen Option : --

Q.5 दिये गये वाक्य में रेखांकित अंश को प्रतिस्थापित करने के लिए सबसे उपयुक्त विकल्प का चयन करें।

इस गीत की दो चार लड़ियाँ सुना दो।

- Ans
- 1. कड़ियाँ
 - 2. झड़ियाँ
 - 3. छद
 - 4. कविता

Question ID : 65497828709
Status : Not Answered
Chosen Option : --

Q.6 दिए गए शब्द के समानार्थी शब्द का चयन करें।

सुधा

- Ans
- 1. द्रव्य
 - 2. पीयूष
 - 3. वारि
 - 4. पावन

Question ID : 65497828700

Status : Not Answered

Chosen Option : --

Q.7 माल-सामान की बिक्री करनेवाला

शब्द समूह के स्थान पर एक शब्द लिखिए-

- Ans
- 1. क्रेता
 - 2. ग्राहक
 - 3. बुभुक्षा
 - 4. विक्रेता

Question ID : 65497828713

Status : Not Answered

Chosen Option : --

Q.8 दिए गए वाक्य में रेखांकित खंड को प्रतिस्थापित करने के लिए सबसे उपयुक्त विकल्प का चयन करें।
यदि इसे प्रतिस्थापित करने की आवश्यकता नहीं है, तो विकल्प 'किसी बदलाव की आवश्यकता नहीं है'
का चयन करें।

थोड़ी देर बाद वे वापस लौट आये।

- Ans
- 1. किसी बदलाव की आवश्यकता नहीं है।
 - 2. वे वापसी लौट आये
 - 3. वे लौट आये वापस
 - 4. वे लौट आये

Question ID : 65497828705

Status : Not Answered

Chosen Option : --

Q.9 दिए गए वाक्य का वह भाग ज्ञात करें जिसमें कोई त्रुटि है। यदि कोई त्रुटि नहीं है, तो 'कोई त्रुटि नहीं है'
चुनें।

गणतंत्र दिवस की परेड को (1)/ लाखों बालक, वृद्ध नर और नारी (2)/ देख रही थी। (3)/ कोई त्रुटि नहीं है(4)

- Ans
- 1. 3
 - 2. 4
 - 3. 1
 - 4. 2

Question ID : 65497828703

Status : Not Answered

Chosen Option : --

Q.10 मेरे से प्रश्न मत पूछना - रेखांकित शब्द की त्रुटि पहचानिए-

- Ans 1. क्रिया विशेष के कारण
 2. सर्वनाम के कारण
 3. विशेषण के कारण
 4. सज्ञा के कारण

Question ID : 65497828710
Status : Not Answered
Chosen Option : --

Q.11 बिना पलक झपकाए - वाक्यांश के लिए एक शब्द है:

- Ans 1. निर्निमेष
 2. पलक
 3. निमेष
 4. मेष

Question ID : 65497828712
Status : Not Answered
Chosen Option : --

Q.12 दिए गए शब्द का विलोम चुनें-

सौम्य

- Ans 1. स्तुत्य
 2. उग्र
 3. निघ्न
 4. सेवित

Question ID : 65497828706
Status : Not Answered
Chosen Option : --

Q.13 दिए गए वाक्य का वो भाग ज्ञात करें जिसमें कोई त्रुटि है। यदि कोई त्रुटि नहीं है, तो 'कोई त्रुटि नहीं है' चुनें।

रण में सेनापति के वीरता (1) दिखाने का कारण राष्ट्रपति ने (2) उसे वीरचक्र प्रदान किया। (3) कोई त्रुटि नहीं है (4)

- Ans 1. 4
 2. 1
 3. 2
 4. 3

Question ID : 65497828699
Status : Not Answered
Chosen Option : --

Q.14 'जिसकी जड़ या आधार का पता न हो' इस वाक्यांश के लिए एक सार्थक शब्द दीजिए।

- Ans 1. निर्दय
 2. निर्मम
 3. निर्भय
 4. निर्मूल

Question ID : 65497828694
Status : Not Answered
Chosen Option : --

Q.15 दिए गए चार विकल्पों में से, उस विकल्प का चयन करें, जो नीचे दिए मुहावरे का अर्थ व्यक्त करता है।

भागीरथ प्रयत्न

- Ans
- 1. प्रयास न करना
 - 2. उनकी कोशिश
 - 3. थोड़ा प्रयास
 - 4. भारी कोशिश

Question ID : 65497828707
Status : Not Answered
Chosen Option : --

Q.16 सही वर्तनी वाले शब्द का चयन करें।

- Ans
- 1. शैक्षणिक
 - 2. शिक्षणिक
 - 3. शैक्षणिक
 - 4. सैक्षणिक

Question ID : 65497828702
Status : Not Answered
Chosen Option : --

Q.17 सही वर्तनी वाले शब्द का चयन करें।

- Ans
- 1. अरण्य
 - 2. अरिण्य
 - 3. अरन्य
 - 4. अरिन्य

Question ID : 65497828701
Status : Not Answered
Chosen Option : --

Q.18 रिक्त स्थान को भरने के लिए सबसे उपयुक्त शब्द का चयन कीजिए।

पृथ्वी का _____ गोल है।

- Ans
- 1. स्वरूप
 - 2. क्षमता
 - 3. रूप
 - 4. आकार

Question ID : 65497828695
Status : Not Answered
Chosen Option : --

Q.19 'कमर कसना' मुहावरे का अर्थ बताइए-

- Ans
- 1. तैयार होना
 - 2. दर्द होना
 - 3. हौसला हारना
 - 4. सहारा देना

Question ID : 65497828697
Status : Not Answered
Chosen Option : --

Q.20 दिए गए शब्द के समानार्थी शब्द का चयन करें।

अमृत

- Ans 1. अद्भुत
 2. वसुधा
 3. अलौकिक
 4. सुधा

Question ID : 65497828704

Status : Not Answered

Chosen Option : --

Comprehension:

निम्नलिखित गद्यांश को पढ़कर प्रश्नों के उचित उत्तर दीजिए-

प्राचीन काल में नारी का स्थान बहुत ही महत्वपूर्ण था। ऐसा कहा जाता है कि "जहाँ नारी की पूजा होती है, वहाँ देवता निवास करते हैं" मध्यकालीन युग से नारी का पतन शुरू हो गया। नारी को दासी या गुलाम माना जाने लगा। नारी घर में ही कैद हो गई। 19वीं सदी में राजा राममोहन राय, स्वामी विवेकानंद, दयानंद सरस्वती आदि महानुभावों ने समाज सुधारकों के प्रयासों से नारी अबला से सबला बनती गई। सम्पूर्ण कायापलट हो गयी। नारी प्रगति के पथ पर निरंतर आगे बढ़ती गयी, आज की नारी ने जमीन से लेकर अंतरिक्ष तक अपना कब्जा जमाया है। नर और नारी रथ के दो पहिये हैं, रथ को सुव्यवस्थित चलाने के लिए सतुलन होना चाहिए, तो ही परिवार सुख से जीता है। शिक्षित नारी परिवार की उद्धारक है। प्रत्येक घर में नारी का सम्मान होना चाहिए। समाज में प्रचलित कुरीतियों को दूर करने में दोनों को एक-दूसरे का सहयोगी बनना चाहिए। नारी का उद्धार देश का उद्धार है। अर्थात् नारी को सदैव सम्मान देना चाहिए।

SubQuestion No : 21

Q.21 आकाश- कौन-सा शब्द रेखांकित शब्द का पर्याय नहीं है?

- Ans 1. नभ
 2. गगन
 3. अम्बर
 4. अतल

Question ID : 65497828715

Status : Not Answered

Chosen Option : --

Comprehension:

निम्नलिखित गद्यांश को पढ़कर प्रश्नों के उचित उत्तर दीजिए-

प्राचीन काल में नारी का स्थान बहुत ही महत्वपूर्ण था। ऐसा कहा जाता है कि "जहाँ नारी की पूजा होती है, वहाँ देवता निवास करते हैं" मध्यकालीन युग से नारी का पतन शुरू हो गया। नारी को दासी या गुलाम माना जाने लगा। नारी घर में ही कैद हो गई। 19वीं सदी में राजा राममोहन राय, स्वामी विवेकानंद, दयानंद सरस्वती आदि महानुभावों ने समाज सुधारकों के प्रयासों से नारी अबला से सबला बनती गई। सम्पूर्ण कायापलट हो गयी। नारी प्रगति के पथ पर निरंतर आगे बढ़ती गयी, आज की नारी ने जमीन से लेकर अंतरिक्ष तक अपना कब्जा जमाया है। नर और नारी रथ के दो पहिये हैं, रथ को सुव्यवस्थित चलाने के लिए सतुलन होना चाहिए, तो ही परिवार सुख से जीता है। शिक्षित नारी परिवार की उद्धारक है। प्रत्येक घर में नारी का सम्मान होना चाहिए। समाज में प्रचलित कुरीतियों को दूर करने में दोनों को एक-दूसरे का सहयोगी बनना चाहिए। नारी का उद्धार देश का उद्धार है। अर्थात् नारी को सदैव सम्मान देना चाहिए।

SubQuestion No : 22

Q.22 अबला रेखांकित शब्द का विलोम बताइए।

- Ans 1. नारी
 2. दासी
 3. दुर्बल
 4. सबला

Question ID : 65497828716

Status : Not Answered

Chosen Option : --

Comprehension:

निम्नलिखित गद्यांश को पढ़कर प्रश्नों के उचित उत्तर दीजिए-

प्राचीन काल में नारी का स्थान बहुत ही महत्वपूर्ण था। ऐसा कहा जाता है कि "जहाँ नारी की पूजा होती है, वहाँ देवता निवास करते हैं" मध्यकालीन युग से नारी का पतन शुरू हो गया। नारी को दासी या गुलाम माना जाने लगा। नारी घर में ही कैद हो गई। 19वीं सदी में राजा राममोहन राय, स्वामी विवेकानंद, दयानंद सरस्वती आदि महानुभावों ने समाज सुधारकों के प्रयासों से नारी अबला से सबला बनती गई। सम्पूर्ण कायापलट हो गयी। नारी प्रगति के पथ पर निरंतर आगे बढ़ती गयी, आज की नारी ने जमीन से लेकर अंतरिक्ष तक अपना कब्जा जमाया है। नर और नारी रथ के दो पहिये हैं, रथ को सुव्यवस्थित चलाने के लिए सतुलन होना चाहिए, तो ही परिवार सुख से जीता है। शिक्षित नारी परिवार की उद्धारक है। प्रत्येक घर में नारी का सम्मान होना चाहिए। समाज में प्रचलित कुरीतियों को दूर करने में दोनों को एक दूसरे का सहयोगी बनना चाहिए। नारी का उद्धार देश का उद्धार है। अर्थात् नारी को सदैव सम्मान देना चाहिए।

SubQuestion No : 23

Q.23 एक दूसरे का _____ बनना चाहिए। रिक्त स्थान की पूर्ति कीजिए।

- Ans
- 1. सयोगी
 - 2. सहयोगी
 - 3. सहाय
 - 4. असहयोगी

Question ID : 65497828717

Status : Not Answered

Chosen Option : --

Comprehension:

निम्नलिखित गद्यांश को पढ़कर प्रश्नों के उचित उत्तर दीजिए-

प्राचीन काल में नारी का स्थान बहुत ही महत्वपूर्ण था। ऐसा कहा जाता है कि "जहाँ नारी की पूजा होती है, वहाँ देवता निवास करते हैं" मध्यकालीन युग से नारी का पतन शुरू हो गया। नारी को दासी या गुलाम माना जाने लगा। नारी घर में ही कैद हो गई। 19वीं सदी में राजा राममोहन राय, स्वामी विवेकानंद, दयानंद सरस्वती आदि महानुभावों ने समाज सुधारकों के प्रयासों से नारी अबला से सबला बनती गई। सम्पूर्ण कायापलट हो गयी। नारी प्रगति के पथ पर निरंतर आगे बढ़ती गयी, आज की नारी ने जमीन से लेकर अंतरिक्ष तक अपना कब्जा जमाया है। नर और नारी रथ के दो पहिये हैं, रथ को सुव्यवस्थित चलाने के लिए सतुलन होना चाहिए, तो ही परिवार सुख से जीता है। शिक्षित नारी परिवार की उद्धारक है। प्रत्येक घर में नारी का सम्मान होना चाहिए। समाज में प्रचलित कुरीतियों को दूर करने में दोनों को एक दूसरे का सहयोगी बनना चाहिए। नारी का उद्धार देश का उद्धार है। अर्थात् नारी को सदैव सम्मान देना चाहिए।

SubQuestion No : 24

Q.24 मध्यकालीन युग में नारी की स्थिति क्या थी?

- Ans
- 1. दासी
 - 2. पूजनीय थी
 - 3. शिक्षित थी
 - 4. महत्वपूर्ण स्थान था

Question ID : 65497828718

Status : Not Answered

Chosen Option : --

Comprehension:

निम्नलिखित गद्यांश को पढ़कर प्रश्नों के उचित उत्तर दीजिए-

प्राचीन काल में नारी का स्थान बहुत ही महत्वपूर्ण था। ऐसा कहा जाता है कि "जहाँ नारी की पूजा होती है, वहाँ देवता निवास करते हैं" मध्यकालीन युग से नारी का पतन शुरू हो गया। नारी को दासी या गुलाम माना जाने लगा। नारी घर में ही कैद हो गई। 19वीं सदी में राजा राममोहन राय, स्वामी विवेकानंद, दयानंद सरस्वती आदि महानुभावों ने समाज सुधारकों के प्रयासों से नारी अबला से सबला बनती गई। सम्पूर्ण कायापलट हो गयी। नारी प्रगति के पथ पर निरंतर आगे बढ़ती गयी, आज की नारी ने जमीन से लेकर अंतरिक्ष तक अपना कब्जा जमाया है। नर और नारी रथ के दो पहिये हैं, रथ को सुव्यवस्थित चलाने के लिए सतुलन होना चाहिए, तो ही परिवार सुख से जीता है। शिक्षित नारी परिवार की उद्धारक है। प्रत्येक घर में नारी का सम्मान होना चाहिए। समाज में प्रचलित कुरीतियों को दूर करने में दोनों को एक दूसरे का सहयोगी बनना चाहिए। नारी का उद्धार देश का उद्धार है। अर्थात् नारी को सदैव सम्मान देना चाहिए।

SubQuestion No : 25

Q.25 गद्यांश का उचित शीर्षक बताइए।

- Ans
- 1. यदि मैं शिक्षक बनूँ...!
 - 2. मेरे सपनों का भारत
 - 3. नारी तू नारायणी
 - 4. दहेज प्रथा

Question ID : 65497828719

Status : **Not Answered**

Chosen Option : --