

## Constable (GD) in CAPFs, NIA, SSF and Rifleman (GD) in Assam Rifles Examination, 2018

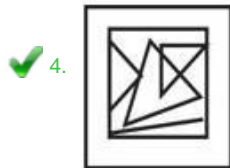
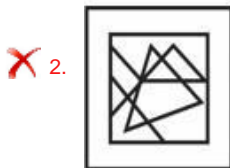
Roll No. :	
Registration No.	
Name :	
Exam Venue :	iON Digital Zone iDZ Attingal
Exam Time :	9:00 AM - 10:30 AM
Exam Date :	02/03/2019

Section : General Section

**Q.1** Identify the figure from the options that has the given figure embedded in it. (Rotation is not allowed)



Ans



Question ID : 9895808235

Chosen Option : 1

**Q.2**

Select the option that is related to the third term in the same way as the second term is related to the first term.

Thermometer : Temperature :: Lactometer : ?

Ans  1. Honey

2. Rain

3. Milk

4. Wind

Question ID : 9895808217

Chosen Option : 2

**Q.3**

A square transparent sheet with a pattern is given. How will the pattern appear when the transparent sheet is folded along the dotted line?



Ans

- 1.
- 2.
- 3.
- 4.

Question ID : 9895808237  
Chosen Option : 2

Q.4 Pick the odd one out.

- Ans  1. EFRS  
 2. ANBO  
 3. CODQ  
 4. GTHU

Question ID : 9895808215  
Chosen Option : 1

Q.5 Find the next number in the given series.

37, 45, 53, 61, ?

- Ans  1. 69  
 2. 72  
 3. 62  
 4. 65

Question ID : 9895808227  
Chosen Option : 1

Q.6 What will be the value of the following equation if '+' means 'addition', '-' means 'subtraction', '×' means 'multiplication' and '÷' means 'division'?

$$48 \times 6 - 5 \div 8 + 1 = ?$$

- Ans  1.

2. 49

3. 56

4. 53

Question ID : 9895808232  
Chosen Option : 1

Q.7 Select the option that is related to the third term in the same way as the second term is related to the first term.

2 : 12 :: 5 : ?

Ans  1. 20

2. 15

3. 10

4. 30

Question ID : 9895808229  
Chosen Option : 4

Q.8 Find the next number in the given series.

6, 12, 21, 32, ?

Ans  1. 53

2. 49

3. 41

4. 47

Question ID : 9895808228  
Chosen Option : 4

Q.9 There are a few students sitting on a classroom bench. Anand is sitting in the 7<sup>th</sup> position from the left-hand side. Binoy is sitting in the 5<sup>th</sup> position from the right-hand side. Five students are sitting between Anand and Binoy. In total, the class has six rows of benches with equal number of students sitting on all of them. What is the total number of students in the class?

Ans  1. 99


2. 114

3. 102

4. 122

Question ID : 9895808222  
Chosen Option : 3

Q.1 Select the option that will replace the question mark and complete the given pattern.



Ans

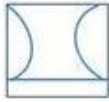
1.



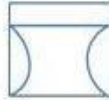
2.



~~3.~~



~~4.~~



Question ID : 9895808234

Chosen Option : 1

**Q.1** The statements below are followed by two conclusions labeled I and II. Assuming that the information in the statements is true, even if it appears to be at variance with generally established facts, decide which conclusion(s) logically and definitely follow(s) from the information given in the statements.

**Statements:**

- I. All pencils are lanes.
- II. All lanes are cottages.

**Conclusion:**

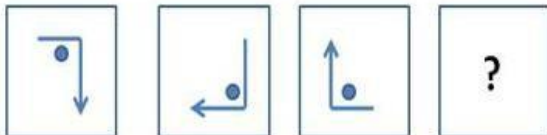
- I. All cottages are pencils.
- II. Some cottages are pencils.

- Ans** ~~1.~~ Both conclusions I and II follow  
~~2.~~ Either conclusion I or II follows  
3. Only conclusion II follows  
4. Only conclusion I follows

Question ID : 9895808226

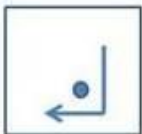
Chosen Option : 1

**Q.1** Which option will replace the question mark and complete the figure series?  
2



**Ans**

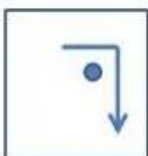
~~1.~~



~~2.~~



~~3.~~



✓ 4.



Question ID : 9895808233  
Chosen Option : 4

Q.1 There is only one runway which will be used by seven flights one by one. P and Q will use the runway neither first nor last. S will use it second after R. M will use it second before O. N will use it after O and before R. Q will use it just before S. Who will use the runway just after M?

- Ans
- 1. N
  - 2. O
  - 3. Q
  - 4. P

Question ID : 9895808224  
Chosen Option : 4

Q.1 Four words have been given out of which three are alike in some manner, while one is different. Choose the odd one.

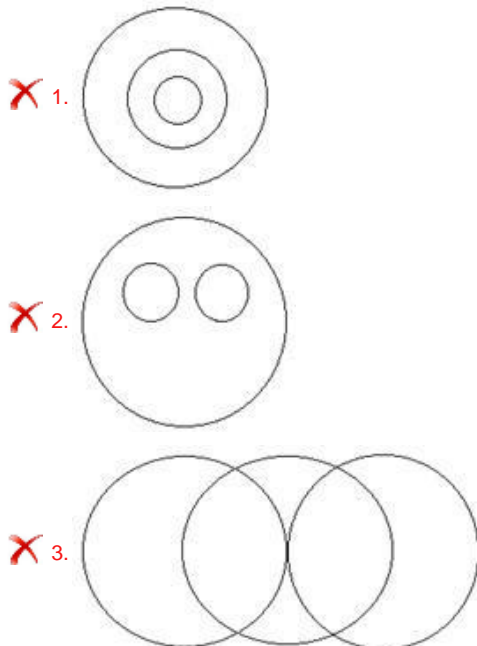
- 4
- Ans
- 1. Tardy
  - 2. Bustle
  - 3. Scuttle
  - 4. Dart

Question ID : 9895808216  
Chosen Option : 1

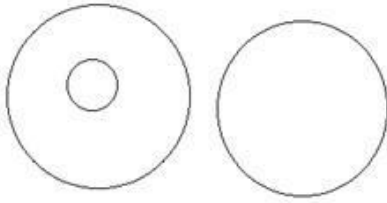
Q.1 Select the Venn diagram that best represents the relationship among the given set of classes:

5  
Pen, Table, Stationery

Ans



✓ 4.



Question ID : 9895808238  
Chosen Option : 1

Q.1 Choose the option that most closely resembles the mirror image of the given word when mirror is placed at right side.

6

INTROVERT

- Ans ✓ 1. **INTROVERT**  
✗ 2. **INTROVERT**  
✗ 3. **INTROVERT**  
✗ 4. **INTROVERT**

Question ID : 9895808236  
Chosen Option : 3

Q.1 Select the option that is related to the third term in the same way as the second term is related to the first term.

7

CC : GD :: LE : ?

- Ans ✗ 1. **RF**  
✗ 2. **PD**  
✓ 3. **PF**  
✗ 4. **EE**

Question ID : 9895808219  
Chosen Option : 3

Q.1 Find the missing number from the below options.

8

4	15	35
13	21	42
9	6	?

- Ans ✓ 1. **7**  
✗ 2. **12**  
✗ 3. **11**  
✗ 4. **15**

Question ID : 9895808231  
Chosen Option : 4

Q.1 Eight friends A, B, C, D, E, F, H and G are sitting around a circular table facing each other for a group discussion. A is opposite F and second to the right of E. B and D are sitting opposite to each other. G is between C and A. H is to the left of E. Who is sitting opposite E?

9

- Ans ✗ 1. **F**  
✗ 2. **D**  
✗ 3. **B**

✓ 4. C

Question ID : 9895808223  
Chosen Option : 1

Q.2 Which pair of letters should follow next in the given series?

AB, DE, GH, JK, ?

- Ans
- 1. RT
  - 2. MN
  - 3. UW
  - 4. PQ

Question ID : 9895808214  
Chosen Option : 2

Q.2 If in a certain code HOUSE is written as 68, then in the same code how will you write the word CASTLE?

1

- Ans
- 1. 84
  - 2. 60
  - 3. 72
  - 4. 59

Question ID : 9895808221  
Chosen Option : 2

Q.2 If in a certain code APRON is written as BRUSR then in the same code how will you write the word STOVE?

2

- Ans
- 1. TRVJZ
  - 2. TVRZI
  - 3. TVRZJ
  - 4. VRTJZ

Question ID : 9895808220  
Chosen Option : 2

Q.2 The statements below are followed by two conclusions labeled I and II. Assuming that the information in the statements is true, even if it appears to be at variance with generally established facts, decide which conclusion(s) logically and definitely follow(s) from the information given in the statements.

3

Statements:

- I. Most poets are boys.
- II. Some boys are painters.

Conclusion:

- I. Some painters are boys.
- II. Some poets are painters.

- Ans
- 1. Only conclusion I follows
  - 2. Either conclusion I or II follows
  - 3. Only conclusion II follows
  - 4. Both conclusions I and II follow

Question ID : 9895808225  
Chosen Option : 4

Q.2 Select the option that is related to the third term in the same way as the second term is related to the first term.

4

Fish : Plankton :: Frog : ?

- Ans
- 1. Hay
  - 2. Weed
  - 3. Insects
  - 4. Herbs

Question ID : 9895808218  
Chosen Option : 1

Q.2 Four numbers have been given out of which three are alike in some manner, while one is different. Choose the odd one.

5

- Ans
- 1. 571
  - 2. 676
  - 3. 361
  - 4. 484

Question ID : 9895808230  
Chosen Option : 4

Q.2 Which sportsman has won the highest number of Player of the Match awards in test cricket?

6

- Ans
- 1. Jacques Kallis
  - 2. Muttiah Muralitharan
  - 3. Shane Warne
  - 4. Sachin Tendulkar

Question ID : 9895807283  
Chosen Option : 4

Q.2 In which year did the Rail Budget get merged with the Union Budget after being separate for 92 years?

7

- Ans
- 1. 2017-18
  - 2. 2018-19
  - 3. 2015-16
  - 4. 2014-15

Question ID : 9895807287  
Chosen Option : 2

Q.2 'Dambe' is a form of martial arts associated with which continent?

8

- Ans
- 1. America
  - 2. Africa
  - 3. Australia
  - 4. Europe

Question ID : 9895807282  
Chosen Option : 2

Q.2 When the Indian Constitution was adopted, how many schedules did it have?

9



- Ans  1. 10  
 2. 12  
 3. 8  
 4. 6

Question ID : 9895807291  
Chosen Option : 3

Q.3 The Battle of Saraighat, fought between the Ahoms of Assam and the Mughals, was fought in which year?  
0

- Ans  1. 1652  
 2. 1635  
 3. 1671  
 4. 1642

Question ID : 9895807301  
Chosen Option : 2

Q.3 The monolithic ruins of Rajbari are located in which Indian state?  
1

- Ans  1. Assam  
 2. Nagaland  
 3. Meghalaya  
 4. Mizoram

Question ID : 9895807280  
Chosen Option : 2

Q.3 'Thang Ta' is a martial arts associated with which Indian state?  
2

- Ans  1. Manipur  
 2. Sikkim  
 3. Assam  
 4. Odisha

Question ID : 9895807281  
Chosen Option : 1

Q.3 'Bidesia' is a popular dance form associated with which Indian state?  
3

- Ans  1. Odisha  
 2. Jharkhand  
 3. Bihar  
 4. West Bengal

Question ID : 9895807278  
Chosen Option : 1

Q.3 Who is the only Indian leader to be bestowed the highest civilian awards by both India and Pakistan  
4 (Bharat Ratna and Nishan-i-Pakistan)?

- Ans  1. Jawaharlal Nehru  
 2. Mahatma Gandhi

3. Sardar Vallabhbhai Patel  
 4. Morarji Desai

Question ID : 9895807285  
Chosen Option : 3

Q.3  
5 The filament in the traditional incandescent bulb is made of which metal?

- Ans  1. Tungsten  
 2. Iron  
 3. Copper  
 4. Platinum

Question ID : 9895807292  
Chosen Option : 4

Q.3  
6 Bhagoria Haat Festival is celebrated in which Indian state?

- Ans  1. Madhya Pradesh  
 2. Uttar Pradesh  
 3. Rajasthan  
 4. Bihar

Question ID : 9895807279  
Chosen Option : 3

Q.3  
7 What is the process by which Ethanol is produced?

- Ans  1. Salinization  
 2. Ligation  
 3. Fermentation  
 4. Titration

Question ID : 9895807293  
Chosen Option : 4

Q.3  
8 The Indus Valley was home to the largest of the four ancient urban civilizations. Which of the following is not one of them?

- Ans  1. Egypt  
 2. Russia  
 3. South Asia  
 4. Mesopotamia

Question ID : 9895807302  
Chosen Option : 1

Q.3  
9 For tea plantation, what kind of climate is best suited?

- Ans  1. Dry and windy  
 2. Dry and dusty  
 3. Warm and humid

4. Very cold weather

Question ID : 9895807295  
Chosen Option : 4

Q.4  
0 Measles is a disease caused by:

- Ans
- 1. amoeba
  - 2. fungi
  - 3. virus
  - 4. bacteria

Question ID : 9895807296  
Chosen Option : 1

Q.4  
1 Which country among the following has the largest land area under agriculture in the world?

- Ans
- 1. China
  - 2. United States of America
  - 3. India
  - 4. Russia

Question ID : 9895807299  
Chosen Option : 1

Q.4  
2 What is the name of the structural protein present in the horn of a rhino and also the human hair?

- Ans
- 1. Glycolytic
  - 2. Keratin
  - 3. Amino acid
  - 4. Melanin

Question ID : 9895807294  
Chosen Option : 1

Q.4  
3 \_\_\_\_\_ refers to the rate at which commercial banks borrow money from the Reserve Bank of India (RBI) in case of shortage of funds.

- Ans
- 1. Exchange rate
  - 2. Repo rate
  - 3. Reverse Repo rate
  - 4. Market rate

Question ID : 9895807286  
Chosen Option : 4

Q.4  
4 When did the government of India pass the PNDT Act to curb the practice of female foeticide?

- Ans
- 1. 1996
  - 2. 1992
  - 3. 1994
  - 4. 1991

Question ID : 9895807290

Q.4  
5 What is the compilation of the teachings of Lord Mahavir called?

- Ans
- 1. Sruti sutras
  - 2. Piby sutras
  - 3. Agam sutras
  - 4. Avesta sutras

Question ID : 9895807300  
Chosen Option : 4

Q.4  
6 Why are traditional houses in Assam built on stilts?

- Ans
- 1. Danger of floods and wildlife
  - 2. Danger of unsanitary conditions
  - 3. Danger of heavy drought
  - 4. Danger of contamination

Question ID : 9895807298  
Chosen Option : 4

Q.4  
7 'Train to Pakistan' is a book written by which of the following author?

- Ans
- 1. Saadat Hasan Manto
  - 2. Ruskin Bond
  - 3. Khuswant Singh
  - 4. Mohsin Hamid

Question ID : 9895807284  
Chosen Option : 4

Q.4  
8 The community market is regulated by which of the following organizations?

- Ans
- 1. SEBI (Securities and Exchange Board of India)
  - 2. BSE (Bombay Stock Exchange)
  - 3. RBI (Reserve Bank of India)
  - 4. NSE (National Stock Exchange)

Question ID : 9895807288  
Chosen Option : 4

Q.4  
9 The concept of 'single citizenship' in India was adopted based on the constitution of which of the given nations?

- Ans
- 1. United States
  - 2. Ireland
  - 3. Russia
  - 4. United Kingdom

Question ID : 9895807289  
Chosen Option : 3

Q.5 Why are the western slopes of the western ghats covered with thick forests unlike the eastern slopes?  
0

- Ans
- 1. Receive more rain
  - 2. Receive less light
  - 3. Receive less rain
  - 4. Receive more light

Question ID : 9895807297  
Chosen Option : 1

Q.5 20% discount on ₹2000 and 2 successive discounts of 10% and 10% will have a difference of:  
1

- Ans
- 1. ₹0
  - 2. ₹30
  - 3. ₹40
  - 4. ₹20

Question ID : 9895807608  
Chosen Option : 3

Q.5 Simplify:  
2

$$8.4 - [5 + 0.3 \text{ of } (3.3 - 2.6 \times 1.07)]$$

- Ans
- 1. 3.2464
  - 2. 3.6244
  - 3. 3.6442
  - 4. 3.2446

Question ID : 9895807605  
Chosen Option : 3

Q.5 The least number which should be added to 3857 so that the sum is exactly divisible by 5, 6, 4 and 3 is:  
3

- Ans
- 1. 33
  - 2. 17
  - 3. 3
  - 4. 43

Question ID : 9895807603  
Chosen Option : 4

Q.5 The population of a town increased from 1,85,000 to 2,77,500 in a decade. The average percent increase of population  
4 per year is:

- Ans
- 1. 6%
  - 2. 5%
  - 3. 4.37%
  - 4. 8.75%

Question ID : 9895807610  
Chosen Option : 3

Q.5 A man goes to Mumbai from Kaylan at a speed of 10 km/h and returns to Kaylan at the speed of 15 km/h. What is his  
5 average speed of the entire journey?

- Ans  1. 12 km/h  
 2. 15 km/h  
 3. 42 km/h  
 4. 56 km/h

Question ID : 9895807621  
Chosen Option : 1

Q.5 The ratio of present age of father to that of son is 4 : 1. 5 years ago, their age were in the ratio of 7 : 1. The present age of the son is:

- Ans  1. 5 years  
 2. 8 years  
 3. 10 years  
 4. 3 years

Question ID : 9895807613  
Chosen Option : 1

Q.5 On selling 17 balls for ₹840, there is a loss equal to the cost price of 5 balls. The cost price (in ₹) of a ball is:

- Ans  1. ₹55  
 2. ₹60  
 3. ₹70  
 4. ₹50

Question ID : 9895807612  
Chosen Option : 4

Q.5 Paper charge is ₹55 per kg. How much expenditure (in ₹) would be there to cover a cube of edge 8 m with a paper, if one kg of paper covers  $192 \text{ m}^2$  area?

- Ans  1. ₹165  
 2. ₹55  
 3. ₹192  
 4. ₹110

Question ID : 9895807622  
Chosen Option : 2

Q.5 At what rate of compound interest per annum will a sum of ₹1800 becomes ₹2178 in two years?

- Ans  1. 10%  
 2. 12%  
 3. 11%  
 4. 13%

Question ID : 9895807617  
Chosen Option : 4

Q.6 A lent ₹6500 to B for 2 years and ₹8000 to C for 4 years on simple interest at the same rate of interest and received ₹4500 in all from both of them as interest. The rate of interest per annum is:

- Ans  1. 5%  
 2. 7%  
 3. 8%  
 4. 10%

Question ID : 9895807616  
Chosen Option : 2

Q.6 Sam purchased 20 dozens of toys at the rate of ₹480 per dozen. He sold each one of them at the rate of ₹42. What was his percentage profit?

- Ans  1. 5%  
 2. 6%  
 3. 5.5%  
 4. 4%

Question ID : 9895807611  
Chosen Option : 4

Q.6 Raju and Vinod are working on an assignment. Raju takes 8 h to type 32 pages on a computer, while Vinod takes 6 h to type 44 pages. How much time will they take, working together on two different computers to type an assignment of 102 pages?

- Ans  1. 12 h  
 2. 14 h  
 3. 9 h  
 4. 10 h

Question ID : 9895807619  
Chosen Option : 1

Q.6 The mean of 25 observations is 36. Out of these observations, if the mean of first 13 observations is 32 and that of the last 13 observations is 40, the 13<sup>th</sup> observation is:

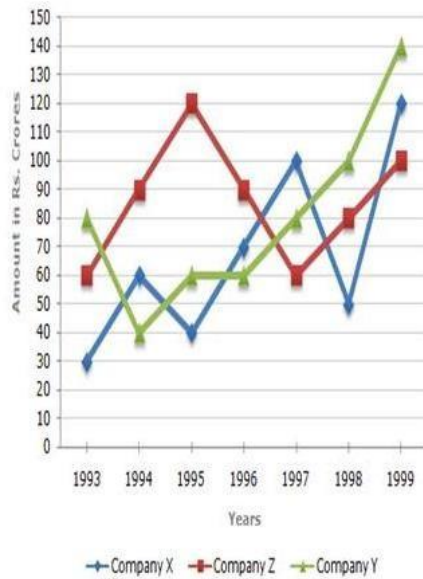
- Ans  1. 23  
 2. 40  
 3. 38  
 4. 36

Question ID : 9895807609  
Chosen Option : 1

Q.6  
4

Study the following line graph and answer the questions.

Exports from Three Companies Over the Years (in ₹ crore)



In which of the following year, the total exports from the three Companies was highest?

- Ans
- 1. 1998
  - 2. 1995
  - 3. 1996
  - 4. 1999

Question ID : 9895807625  
Chosen Option : 2

Q.6 The average weight of A, B and C is 55 kg. If the average weight of A and B is 52 kg and that of B and C is 48 kg, then  
5 the weight of B is:

- Ans
- 1. 50 kg
  - 2. 30 kg
  - 3. 35 kg
  - 4. 32 kg

Question ID : 9895807607  
Chosen Option : 3

Q.6 Original breadth of a rectangular box is 20 cm. The box was then remade in such a way that its length got increased by  
6 15% but the breadth decreased by 5%. This led to an increase in area by  $74 \text{ cm}^2$ . What is the length of the box?

- Ans
- 1. 40 cm
  - 2. 30 cm
  - 3. 20 cm
  - 4. 60 cm

Question ID : 9895807624  
Chosen Option : 1

Q.6 A can do a certain work in the same time in which B and C together can do it. If A and B together could do it in 8 days  
7 and C alone in 40 days, then B alone could do it in:

- Ans
- 1.



2. 15 days
3. 30 days
4. 20 days

Question ID : 9895807618  
Chosen Option : 3

Q.6 If the average marks of three batches of 50, 56 and 44 students respectively are 55, 52, 40, then the average marks of all the students would be:

- Ans  1. 49.48
2. 50.48
3. 49.84
4. 49

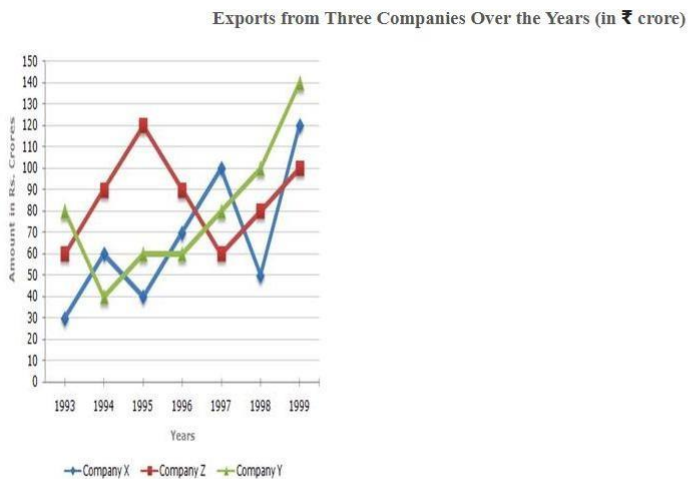
Question ID : 9895807606  
Chosen Option : 2

Q.6 A car travelling with  $\frac{3}{8}$ th of its actual speed covers 65 km in 2 h. 10 min. Find the actual speed of the car.

- Ans  1. 120 km/h
2. 80 km/h
3. 160 km/h
4. 40 km/h

Question ID : 9895807620  
Chosen Option : 4

Q.7 Study the following line graph and answer the questions.



What was the difference between the average exports of the three Companies in 1994 and the average exports in 1995?

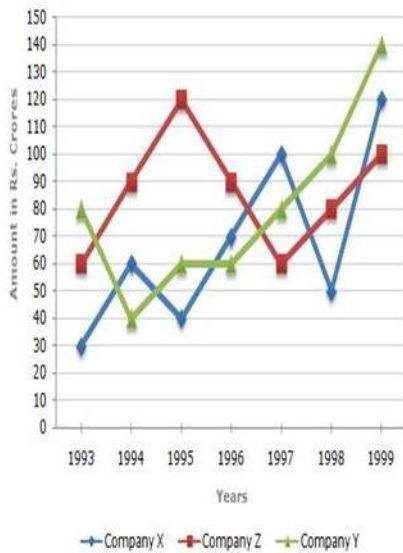
- Ans  1. ₹5 crore
2. ₹20 crore
3. ₹10 crore
4. ₹30 crore

Question ID : 9895807627  
Chosen Option : 4

Q.7  
1

Study the following line graph and answer the questions.

Exports from Three Companies Over the Years (in ₹ crore)



In which year was the difference between the exports to Companies Y and Z the maximum?

- Ans
- 1. 1996
  - 2. 1994
  - 3. 1997
  - 4. 1995

Question ID : 9895807626  
Chosen Option : 4

Q.7 When Jaya divided surface area of a sphere by the sphere's volume, she got the answer as  $\frac{2}{3}$  cm. What is the radius of the sphere?

- Ans
- 1. 5.4 cm
  - 2. 4.5 cm
  - 3. 3.5 cm
  - 4. 4.6 cm

Question ID : 9895807623  
Chosen Option : 2

Q.7 Price of each article of type P, Q, and R is ₹200, ₹300 and ₹400 respectively. Suresh buys articles of each type in the ratio 1 : 2 : 3 for ₹2,000. How many articles of type Q did he purchase?

- Ans
- 1. 4
  - 2. 3
  - 3. 5
  - 4. 2

Question ID : 9895807614  
Chosen Option : 3

Q.7 Two numbers are in ratio 2 : 3. If 50 is subtracted from the first and 50 is added to the second, the ratio becomes 1 : 4. Find the sum of the original numbers.

- Ans
- 1. 400
  - 2. 300
  - 3.
  - 4. 250

Question ID : 9895807615  
Chosen Option : 4

Q.7  
5 Simplify:

$$25 - 48 \div 6 + 12 \times 2$$

- Ans
- 1. 45
  - 2. 51
  - 3. 41
  - 4. 43

Question ID : 9895807604  
Chosen Option : 3

Section : English Language

Q.1 Select the word which means the same as the group of words given.

A place in a large institution for the care of those who are ill.

- Ans
- 1. Clinic
  - 2. Infirmary
  - 3. Shelter
  - 4. Camp

Question ID : 9895807951  
Chosen Option : 1

Q.2 Select the most appropriate option to substitute the underlined segment in the given sentence. If there is no need to substitute it, select No improvement.

He is felt extremely unhappy yesterday because of the inordinate delay of the messenger.

- Ans
- 1. No improvement
  - 2. He has feeling extremely unhappy yesterday
  - 3. He was feeling extremely unhappy yesterday
  - 4. He have been feeling extremely unhappy yesterday

Question ID : 9895807935  
Chosen Option : 3

Q.3 Select the most appropriate word to fill in the blank.

The complexity of the current environment includes many challenges in general, but air pollution in \_\_\_\_\_.

- Ans
- 1. particular
  - 2. common
  - 3. public
  - 4. overall

Question ID : 9895807955  
Chosen Option : 3

Q.4

Select the option that means the same as the given idiom.

To turn over a new leaf

- Ans
1. To turn over the page of a book
  2. To be always careful about one's behaviour
  3. To make new things happen
  4. To change one's behavior for better

Question ID : 9895807950  
Chosen Option : 4

Q.5 Select the most appropriate option to fill in the blank.

Researchers say that about 33 % of people with diabetes may \_\_\_\_\_ a skin disorder in their lifetime.

- Ans
1. has been
  2. has
  3. have
  4. have been

Question ID : 9895807938  
Chosen Option : 1

Q.6 Select the synonym of the given word.

ELAPSED

- Ans
1. Ceased
  2. Prolonged
  3. Persuaded
  4. Connected

Question ID : 9895807946  
Chosen Option : 1

Q.7 Select the word which means the same as the group of words given.

A close fitting cover for the blade of a knife or sword.

- Ans
1. Packet
  2. Mask
  3. Sheath
  4. Pouch

Question ID : 9895807952  
Chosen Option : 4

Q.8 Select the correctly spelt word.

- Ans
1. Infrastructure
  2. Infrastructure

3. Imfrastructure

4. Infrastructur

Question ID : 9895807953  
Chosen Option : 1

**Comprehension:**

In the following passage some words have been deleted.  
Fill in the blanks with the help of the alternatives given.

Man is a 'social animal'. Hence, showing a (1) \_\_\_\_\_  
behaviour is equivalent to showing an animal behaviour.  
Psychologists (2) \_\_\_\_\_ that though violent behaviour  
is inherent but it can be managed. Providing a healthy and  
cordial home environment to kids help them to build  
strong family values and reduce the (3) \_\_\_\_\_ to react  
violently. Rehabilitation homes and support programs are  
available for those (4) \_\_\_\_\_ need professional help.  
Meditation and practicing yoga also helps to (5) \_\_\_\_\_  
negative attitude towards self and others.

SubQuestion No : 9

Q.9 Select the most appropriate option that will fill in the  
blank number 1.

- Ans
- 1. helpful
  - 2. submissive
  - 3. ambitious
  - 4. vicious

Question ID : 9895807940  
Chosen Option : 3

**Comprehension:**

In the following passage some words have been deleted.  
Fill in the blanks with the help of the alternatives given.

Man is a 'social animal'. Hence, showing a (1) \_\_\_\_\_  
behaviour is equivalent to showing an animal behaviour.  
Psychologists (2) \_\_\_\_\_ that though violent behaviour  
is inherent but it can be managed. Providing a healthy and  
cordial home environment to kids help them to build  
strong family values and reduce the (3) \_\_\_\_\_ to react  
violently. Rehabilitation homes and support programs are  
available for those (4) \_\_\_\_\_ need professional help.  
Meditation and practicing yoga also helps to (5) \_\_\_\_\_  
negative attitude towards self and others.

SubQuestion No : 10

Q.1  
0 Select the most appropriate option that will fill in the  
blank number 2.

- Ans  1. say  
2. speak  
 3. says  
4. saying

Question ID : 9895807941  
Chosen Option : 2

Comprehension:

In the following passage some words have been deleted.  
Fill in the blanks with the help of the alternatives given.

Man is a 'social animal'. Hence, showing a (1) \_\_\_\_\_  
behaviour is equivalent to showing an animal behaviour.  
Psychologists (2) \_\_\_\_\_ that though violent behaviour  
is inherent but it can be managed. Providing a healthy and  
cordial home environment to kids help them to build  
strong family values and reduce the (3) \_\_\_\_\_ to react  
violently. Rehabilitation homes and support programs are  
available for those (4) \_\_\_\_\_ need professional help.  
Meditation and practicing yoga also helps to (5) \_\_\_\_\_  
negative attitude towards self and others.

SubQuestion No : 11

Q.1

1 Select the most appropriate option that will fill in the blank number 3.

- Ans
- 1. preference
  - 2. aim
  - 3. tendency
  - 4. choice

Question ID : 9895807942  
Chosen Option : 1

**Comprehension:**

In the following passage some words have been deleted.  
Fill in the blanks with the help of the alternatives given.

Man is a 'social animal'. Hence, showing a (1) \_\_\_\_\_ behaviour is equivalent to showing an animal behaviour. Psychologists (2) \_\_\_\_\_ that though violent behaviour is inherent but it can be managed. Providing a healthy and cordial home environment to kids help them to build strong family values and reduce the (3) \_\_\_\_\_ to react violently. Rehabilitation homes and support programs are available for those (4) \_\_\_\_\_ need professional help. Meditation and practicing yoga also helps to (5) \_\_\_\_\_ negative attitude towards self and others.

SubQuestion No : 12

Q.1  
2 Select the most appropriate option that will fill in the blank number 4.

- Ans
- 1. whose
  - 2. when
  - 3. whom
  - 4. who

Question ID : 9895807943  
Chosen Option : 4

**Comprehension:**

In the following passage some words have been deleted.  
Fill in the blanks with the help of the alternatives given.

Man is a 'social animal'. Hence, showing a (1) \_\_\_\_\_  
behaviour is equivalent to showing an animal behaviour.  
Psychologists (2) \_\_\_\_\_ that though violent behaviour  
is inherent but it can be managed. Providing a healthy and  
cordial home environment to kids help them to build  
strong family values and reduce the (3) \_\_\_\_\_ to react  
violently. Rehabilitation homes and support programs are  
available for those (4) \_\_\_\_\_ need professional help.  
Meditation and practicing yoga also helps to (5) \_\_\_\_\_  
negative attitude towards self and others.

SubQuestion No : 13

Q.1  
3 Select the most appropriate option that will fill in the  
blank number 5.

- Ans
- 1. rectify
  - 2. unsettle
  - 3. deal
  - 4. increase

Question ID : 9895807944  
Chosen Option : 4

Q.1  
4 Select the antonym of the given word.

ASSAULT

- Ans
- 1. Defend
  - 2. Agree
  - 3. Offend
  - 4. Strike

Question ID : 9895807948  
Chosen Option : 3

Q.1  
5 From the given options, identify the segment in the sentence which contains the grammatical error.

Computers everywhere use random numbers as keys to locked or unlock encrypted information.

- Ans
- 1. keys to locked or unlock
  - 2. Computers everywhere
  - 3. use random numbers as
  - 4. encrypted information



Q.1  
6 Select the option that means the same as the given idiom.

To bury the hatchet

- Ans
1. To bury an axe
  2. To bury old utensils
  3. To make peace
  4. To make someone happy

Q.1  
7 Select the antonym of the given word.

INDOLENT

- Ans
1. Lifeless
  2. Inert
  3. Sluggish
  4. Lively

Q.1  
8 Select the most appropriate word to fill in the blank.

If you have a \_\_\_\_\_ for photography, you do not have to wait for your big break.

- Ans
1. passion
  2. demand
  3. claim
  4. response

Q.1  
9 Select the most appropriate option to fill in the blank.



A toddler's brain \_\_\_\_\_ pretty much fully developed by the age of three.

- Ans
1. are
  2. were
  3. was
  4. is

Q.2  
0

From the given options, identify the segment in the sentence which contains the grammatical error.

It makes us realise how unsuitable our education system are because it cannot help us deal with life's most basic issues.


- Ans  1. life's most basic issues
2. it cannot help us
3. education system are
-  4. It makes us realise

Question ID : 9895807931  
Chosen Option : 1

Q.2 From the given options, identify the segment in the sentence which contains the grammatical error.

1

With the help of skill- based education offer in colleges, many students will become eligible for various jobs.

- Ans 1. many students will become
2. With the help of
3. eligible for various jobs
-  4. skill- based education offer in

Question ID : 9895807933  
Chosen Option : 3

Q.2 Select the most appropriate option to substitute the underlined segment in the given sentence. If there is no need to

2 substitute it, select No improvement.

The convict was informed that the judge will heard the case tomorrow.

- Ans 1. No improvement
2. judge will hear the case
3. judge will hearing a case
4. judge hears a case

Question ID : 9895807934  
Chosen Option : 2

Q.2 Select the most appropriate option to substitute the underlined segment in the given sentence. If there is no need to

3 substitute it, select No improvement.

The newly- launched mobile phone application has been a great support for people in remote areas of the country.


- Ans 1. No improvement
2. application have been a great support
3. applications has been a great support
4. applications will been a great support

Question ID : 9895807936  
Chosen Option : 3

Q.2 Select the synonym of the given word.

4

BOUNTIFUL

- Ans 1. Religious
-  2. Pretty

3. Spiritual

✓ 4. Generous

Question ID : 9895807945  
Chosen Option : 3

Q.2  
5 Select the correctly spelt word.

Ans 1. Knowlege

✗ 2. Knowledg

✓ 3. Knowledge

4. Knoledge

Question ID : 9895807954  
Chosen Option : 3

Section : Hindi Language

Q.1 सही वर्तनी वाले शब्द का चयन करें।

Ans 1. विछौना

2. बीछौना

3. बिछोना

4. बिछौना

Question ID : 9895806734  
Chosen Option : --

Q.2 दिए गए वाक्य में रेखांकित खंड को प्रतिस्थापित करने के लिए उपयुक्त विकल्प का चयन करें।

सब आदमी समान नहीं होते।

Ans 1. लोक

2. मनुष्य बराबर

3. प्रत्येक व्यक्ति

✗ 4. हर मानव

Question ID : 9895806713  
Chosen Option : --

Q.3 सही वर्तनी वाले शब्द का चयन करें।

Ans 1. क्षूदा

2. क्षुदा

3. क्षुधा

4. क्षूधा

Question ID : 9895806733  
Chosen Option : --

Q.4

दिए गए शब्द के पर्यायवाची शब्द का चयन करें।

आवाज़

- Ans
1. नंदिनी
  2. नगाड़ा
  3. ध्वनि
  4. अनादर

Question ID : 9895806727  
Chosen Option : --

Q.5 दिए गए वाक्य का वह भाग ज्ञात करें जिसमें कोई त्रुटि है।

आकर्षण का केंद्र यह माण्डवगढ़ शाही महलों की खण्डहर है।

- Ans
1. आकर्षण का केंद्र
  2. खण्डहर है।
  3. यह माण्डवगढ़
  4. शाही महलों की

Question ID : 9895806710  
Chosen Option : --

Q.6 दिये गये वाक्यांश के लिए एक शब्द दीजिये।

राजनीति से संबंधित

- Ans
1. राजनैतिक
  2. अनैतिक
  3. सैद्धांतिक
  4. नैतिक

Question ID : 9895806732  
Chosen Option : --

Q.7 निम्नलिखित में से उस विकल्प का चयन करें जो 'लोहे के चने चबाना' मुहावरे का अर्थ व्यक्त करता है।

- Ans
1. सरल कार्य करना
  2. लोहे से निर्मित चने खाना
  3. अच्छा कार्य करना
  4. बहुत कठिन कार्य करना

Question ID : 9895806730  
Chosen Option : --

Q.8

दिए गए वाक्य में रेखांकित खंड को प्रतिस्थापित करने के लिए उपयुक्त विकल्प का चयन करें।

मोहन अपने काम में प्रवीण है।

- Ans  1. दक्ष  
 2. शातिर  
 3. पूर्ण  
 4. चालाक

Question ID : 9895806712  
Chosen Option : --

Q.9 दिए गए शब्द का विलोम चुनें।

कृत्रिम

- Ans  1. बनावटी  
 2. कृति  
 3. प्राकृतिक  
 4. कृमि

Question ID : 9895806725  
Chosen Option : --

Q.10 दिए गए वाक्य का वह भाग ज्ञात करें जिसमें कोई त्रुटि है।

शिरीष के विशाल वृक्ष बड़ी छायादार होते हैं।

- Ans  1. बड़ी छायादार  
 2. शिरीष के  
 3. होते हैं।  
 4. विशाल वृक्ष

Question ID : 9895806711  
Chosen Option : --

Q.11 रिक्त स्थान को भरने के लिए उपयुक्त शब्द का चयन करें।

वह चला गया था \_\_\_\_\_ रास्ते से लौट आया।

- Ans  1. यदि  
 2. तो  
 3. वह  
 4. परंतु

Q.1  
2 दिए गए शब्द के पर्यायवाची शब्द का चयन करें।

ग्रह

- Ans  1. घर  
 2. कर्म  
 3. आग्रह  
 4. नक्षत्र

Q.1  
3 दिए गए वाक्य का वह भाग ज्ञात करें जिसमें कोई त्रुटि है।

पक्षियों की दुनिया कितना स्वच्छंद होती है।

- Ans  1. कितना स्वच्छंद  
 2. दुनिया  
 3. पक्षियों की  
 4. होती है।

Comprehension:

निम्नलिखित गद्यांश के रिक्त स्थानों की पूर्ति गद्यांश के नीचे दिए गए प्रश्नों के अनुसार कीजिए-

हमारा सौभाग्य है कि समय-समय पर हमारे देश में ऐसे अनेक ऋषि, महर्षि, विद्वान, संत और महात्मा पैदा हुए जिन्होंने विघटन, विरोध और \_\_\_\_\_ (1) की वृत्ति के खतरे को पहचाना और उन्हें समाप्त करने में अपनी पूर्ण \_\_\_\_\_ (2) लगा दी। कबीर और गांधी इसी प्रकार के व्यक्ति थे। उन्होंने एकता और सहिष्णुता की जो धारा बहायी, वह अभी तक \_\_\_\_\_ (3) नहीं हुई। आज भी हमारे देश में सौभाग्य से ऐसे नेता, विचारक और समाजसेवी \_\_\_\_\_ (4) हैं जो इस खतरे के विरुद्ध अपनी आवाज बुलंद करते रहते हैं और समय आने पर अपने \_\_\_\_\_ (5) की बाजी लगाने के लिए तैयार हो जाते हैं।

SubQuestion No : 14

Q.1  
4

गद्यांश में संकेतित रिक्त स्थान (1) के लिए उपयुक्त शब्द होगा।

- Ans  1. अलगाव  
 2. चुनाव  
 3. लगाव  
 4. असंतुष्ट

Question ID : 9895806720  
Chosen Option : --

Comprehension:

निम्नलिखित गद्यांश के रिक्त स्थानों की पूर्ति गद्यांश के नीचे दिए गए प्रश्नों के अनुसार कीजिए-

हमारा सौभाग्य है कि समय-समय पर हमारे देश में ऐसे अनेक ऋषि, महर्षि, विद्वान, संत और महात्मा पैदा हुए जिन्होंने विघटन, विरोध और \_\_\_\_\_ (1) की वृत्ति के खतरे को पहचाना और उन्हें समाप्त करने में अपनी पूर्ण \_\_\_\_\_ (2) लगा दी। कबीर और गांधी इसी प्रकार के व्यक्ति थे। उन्होंने एकता और सहिष्णुता की जो धारा बहायी, वह अभी तक \_\_\_\_\_ (3) नहीं हुई। आज भी हमारे देश में सौभाग्य से ऐसे नेता, विचारक और समाजसेवी \_\_\_\_\_ (4) हैं जो इस खतरे के विरुद्ध अपनी आवाज बुलंद करते रहते हैं और समय आने पर अपने \_\_\_\_\_ (5) की बाजी लगाने के लिए तैयार हो जाते हैं।

SubQuestion No : 15

Q.1  
5 गद्यांश में संकेतित रिक्त स्थान (2) के लिए उपयुक्त शब्द होगा।

- Ans  1. इच्छा  
 2. स्वतंत्रता  
 3. शक्ति  
 4. महत्वकांक्षा

Question ID : 9895806721  
Chosen Option : --

Comprehension:

निम्नलिखित गद्यांश के रिक्त स्थानों की पूर्ति गद्यांश के नीचे दिए गए प्रश्नों के अनुसार कीजिए-

हमारा सौभाग्य है कि समय-समय पर हमारे देश में ऐसे अनेक ऋषि, महर्षि, विद्वान, संत और महात्मा पैदा हुए जिन्होंने विघटन, विरोध और \_\_\_\_\_ (1) की वृत्ति के खतरे को पहचाना और उन्हें समाप्त करने में अपनी पूर्ण \_\_\_\_\_ (2) लगा दी। कबीर और गांधी इसी प्रकार के व्यक्ति थे। उन्होंने एकता और सहिष्णुता की जो धारा बहायी, वह अभी तक \_\_\_\_\_ (3) नहीं हुई। आज भी हमारे देश में सौभाग्य से ऐसे नेता, विचारक और समाजसेवी \_\_\_\_\_ (4) हैं जो इस खतरे के विरुद्ध अपनी आवाज बुलंद करते रहते हैं और समय आने पर अपने \_\_\_\_\_ (5) की बाजी लगाने के लिए तैयार हो जाते हैं।

SubQuestion No : 16

Q.1  
6 गद्यांश में संकेतित रिक्त स्थान (3) के लिए उपयुक्त शब्द होगा।

- Ans
1. क्षीण
  2. बड़ी
  3. अधिक
  4. दीर्घ

Question ID : 9895806722

Chosen Option : --

Comprehension:

निम्नलिखित गद्यांश के रिक्त स्थानों की पूर्ति गद्यांश के नीचे दिए गए प्रश्नों के अनुसार कीजिए-

हमारा सौभाग्य है कि समय-समय पर हमारे देश में ऐसे अनेक ऋषि, महर्षि, विद्वान, संत और महात्मा पैदा हुए जिन्होंने विघटन, विरोध और \_\_\_\_\_ (1) की वृत्ति के खतरे को पहचाना और उन्हें समाप्त करने में अपनी पूर्ण \_\_\_\_\_ (2) लगा दी। कबीर और गांधी इसी प्रकार के व्यक्ति थे। उन्होंने एकता और सहिष्णुता की जो धारा बहायी, वह अभी तक \_\_\_\_\_ (3) नहीं हुई। आज भी हमारे देश में सौभाग्य से ऐसे नेता, विचारक और समाजसेवी \_\_\_\_\_ (4) हैं जो इस खतरे के विरुद्ध अपनी आवाज बुलंद करते रहते हैं और समय आने पर अपने \_\_\_\_\_ (5) की बाजी लगाने के लिए तैयार हो जाते हैं।

SubQuestion No : 17

Q.1  
7



गद्यांश में संकेतित रिक्त स्थान (4) के लिए उपयुक्त शब्द होगा।

- Ans
1. लुप्त
  2. वर्तमान
  3. विलीन
  4. मौजूद

Question ID : 9895806723  
Chosen Option : --

Comprehension:

निम्नलिखित गद्यांश के रिक्त स्थानों की पूर्ति गद्यांश के नीचे दिए गए प्रश्नों के अनुसार कीजिए-

हमारा सौभाग्य है कि समय-समय पर हमारे देश में ऐसे अनेक ऋषि, महर्षि, विद्वान, संत और महात्मा पैदा हुए जिन्होंने विघटन, विरोध और \_\_\_\_\_ (1) की वृत्ति के खतरे को पहचाना और उन्हें समाप्त करने में अपनी पूर्ण \_\_\_\_\_ (2) लगा दी। कबीर और गांधी इसी प्रकार के व्यक्ति थे। उन्होंने एकता और सहिष्णुता की जो धारा बहायी, वह अभी तक \_\_\_\_\_ (3) नहीं हुई। आज भी हमारे देश में सौभाग्य से ऐसे नेता, विचारक और समाजसेवी \_\_\_\_\_ (4) हैं जो इस खतरे के विरुद्ध अपनी आवाज बुलंद करते रहते हैं और समय आने पर अपने \_\_\_\_\_ (5) की बाजी लगाने के लिए तैयार हो जाते हैं।

SubQuestion No : 18

Q.1  
8 गद्यांश में संकेतित रिक्त स्थान (5) के लिए उपयुक्त शब्द होगा।

- Ans
- ✓ 1. मन
  - ✗ 2. इच्छा
  - ✗ 3. प्राण
  4. दिल

Question ID : 9895806724  
Chosen Option : --

Q.1  
9 रिक्त स्थान को भरने के लिए उपयुक्त शब्द का चयन करें।

अनाज \_\_\_\_\_ में उगता है।

- Ans
1. खेतों
  2. जहाजों
  - ✗ 3. मैदानों

4. सड़कों

Question ID : 9895806715  
Chosen Option : --

Q.2  
0 रिक्त स्थान को भरने के लिए सबसे उपयुक्त शब्द का चयन करें।

बोतल में पानी \_\_\_\_\_ भरा है।

- Ans  1. आधा  
2. को साथ  
3. के बदले  
4. के बारे में

Question ID : 9895806716  
Chosen Option : --

Q.2  
1 निम्नलिखित में से उस विकल्प का चयन करें जो 'रूढ़ काँपना' मुहावरे का अर्थ व्यक्त करता है।

- Ans  1. बहुत निडर  
2. बहुत डरना  
3. बहुत काँपना  
4. बहुत सदी लगाना

Question ID : 9895806729  
Chosen Option : --

Q.2  
2 दिए गए शब्द का विलोम चुनें।

सत्कार

- Ans 1. तिरस्कार  
2. पुरस्कार  
3. बेकार  
 4. सम्मान

Question ID : 9895806726  
Chosen Option : --

Q.2  
3 दिये गये वाक्यांश के लिए एक शब्द दीजिये।

जिसकी आयु कम हो

- Ans 1. शतायु  
2. अल्पायु  
 3. दीर्घायु

4. चिरंजीवी

Question ID : 9895806731  
Chosen Option : --

Q.2  
4 दिए गए वाक्य में रेखांकित खंड को प्रतिस्थापित करने के लिए उपयुक्त विकल्प का चयन करें।

हमारा ईश्वर में विश्वास है।

Ans

- ✓ 1. भगवान  
2. विष्णु  
3. शंकर  
4. कृष्ण

Question ID : 9895806714  
Chosen Option : --

Q.2  
5 रिक्त स्थान को भरने के लिए उपयुक्त शब्द का चयन करें।

रीमा ने \_\_\_\_\_ से फल काटे।

Ans

1. चाकू  
✗ 2. तलवार  
3. कैंची  
4. कुल्हाड़ी

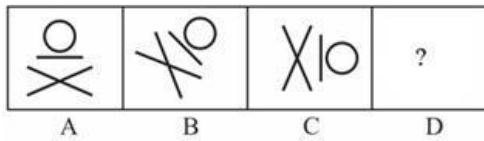
Question ID : 9895806718  
Chosen Option : --

## Constable (GD) in CAPFs, NIA, SSF and Rifleman (GD) in Assam Rifles Examination, 2018

Roll No. :	
Registration No.	
Name :	
Exam Venue :	iON Digital Zone iDZ Airport Road
Exam Time :	12:30 PM - 2:00 PM
Exam Date :	02/03/2019

Section : General Section

Q.1 Which option will replace the question mark and complete the given series?



A                  B                  C                  D

Ans



Question ID : 9895808258

Chosen Option : 2

Q.2

Which pair of letters will follow next in the given letter cluster series?

ZX, WU, TR, QO, ?

Ans

✓ 1. NL

✗ 2. PR

✗ 3. NK

✗ 4. ML

Question ID : 9895808239

Chosen Option : 1

Q.3 Find the missing number from the below options.

36	13	31
28	10	24
18	23	?

- Ans
- 1. 36
  - 2. 27
  - 3. 32
  - 4. 20

Question ID : 9895808256  
Chosen Option : 3

Q.4 If in a code language PINK is written as OHMJ, then in the same language how will you write the word BLUE?

- Ans
- 1. AKTD
  - 2. TKDA
  - 3. KTDA
  - 4. DATK

Question ID : 9895808245  
Chosen Option : 1

Q.5 The statements below are followed by two conclusions labeled I and II. Assuming that the information in the statements is true, even if it appears to be at variance with generally established facts, decide which conclusion(s) logically and definitely follow(s) from the information given in the statements.

Statements:

All stories are novels.

All stories are poems.

Conclusion:

- I. No stories are poems.
- II. Some poems are stories.

- Ans
- 1. Only conclusion I follows.
  - 2. Only conclusion II follows.
  - 3. Either conclusion I or conclusion II follows.
  - 4. Both conclusions follow.

Question ID : 9895808250  
Chosen Option : 2

Q.6 Choose the odd one out of the given options.

- Ans
- 1. Germanium
  - 2. Carbon
  - 3. Silicon
  - 4. Aurum

Question ID : 9895808241

Q.7 Choose the option that most closely resembles the mirror image of the given word when mirror is placed at right side.

TOLERANT

- Ans  1. TOLERNAT
2. TOLERNAT
3. TOLERNAT
4. TOLERNAT

Question ID : 9895808261  
Chosen Option : 2

Q.8 What will be the value of the following equation if '+' means 'addition', '-' means 'subtraction', '×' means 'multiplication' and '÷' means 'division'?

$$75 \times 5 - 4 \div 7 + 2 = ?$$

- Ans  1. 69
2. 65
3. 72
4. 67

Question ID : 9895808257  
Chosen Option : 2

Q.9 Eight friends P, Q, R, S, T, U, V and W are seated around a round table facing the center of the table. P is not sitting beside T, while R is sitting third to the right side of Q. W is second to the left of T who is sitting next to the right of R. U is not sitting side of either T or Q, but he is sitting immediately to the left of V. Identify who is sitting immediately to the right of Q.

- Ans  1. P
2. T
3. S
4. R

Question ID : 9895808247  
Chosen Option : 4

Q.1 The statements below are followed by two conclusions labeled I and II. Assuming that the information in the statements is true, even if it appears to be at variance with generally established facts, decide which conclusion(s) logically and definitely follow(s) from the information given in the statements.

Statements:

Some victims are judges.

Some judges are dacoits.

Conclusion:

I. Some victims are dacoits.

II. No victims are dacoits.

- Ans  1. Both conclusions follow.
2. Only conclusion II follows.
3. Only conclusion I follows.
4. Either conclusion I or conclusion II follows.

Question ID : 9895808251  
Chosen Option : 2

Q.1 Identify the odd one from the following.

- Ans  1. GITV  
 2. DFQS  
 3. JKXY  
 4. ACNP

Question ID : 9895808240  
 Chosen Option : 3

Q.1 Select the option that is related to the third term in the same way as the second term is related to the first term.

2  
 4 : 19 :: 6 : ?

- Ans  1. 39  
 2. 30  
 3. 24  
 4. 36

Question ID : 9895808254  
 Chosen Option : 1

Q.1 Find the figure from the options that has the given figure embedded in it.



Ans

- 1.
- 2.
- 3.
- 4.

Question ID : 9895808260  
 Chosen Option : 4

Q.1 Select the option that is related to the third term in the same way as the second term is related to the first term.

4  
 BCD : DFH :: JKL : ?

- Ans  1. NLP  
 2. MNO  
 3. LMP  
 4. LNP

Question ID : 9895808244  
 Chosen Option : 4

Q.1

5 Select the option that will replace the question mark and complete the given pattern.



Ans



Question ID : 9895808259  
Chosen Option : 1

Q.1 There is only one runway that will be used by seven flights one by one. P and Q will use the runway neither first nor last. S will use it second after R. M will use it second before O. N will use it after O and before R. Q will use the runway just before S. Who will use the runway just before Q?

- Ans
- 1. O
  - 2. S
  - 3. R
  - 4. P

Question ID : 9895808249  
Chosen Option : 3

Q.1 Select the option that is related to the third term in the same way as the second term is related to the first term.

7

Go : Depart :: Spend : ?

- Ans
- 1. Use
  - 2. Went
  - 3. Make
  - 4. Save

Question ID : 9895808242  
Chosen Option : 4

Q.1 Identify the odd one from the following.

8

- Ans
- 1. 261
  - 2. 333
  - 3. 432
  - 4. 516

Question ID : 9895808255  
Chosen Option : 2

Q.1



9 Some students are sitting in a row. Ravish is the 6<sup>th</sup> student in the row from the left end. Vaibhav is seated at the 10<sup>th</sup> position from the right end of the row. In that row, 8 boys are sitting between Ravish and Vaibhav. How many boys in total are sitting in the row?

- Ans
- 1. 32
  - 2. 20
  - 3. 27
  - 4. 24

Question ID : 9895808248  
Chosen Option : 4

Q.2 Select the option that is related to the third term in the same way as the second term is related to the first term.

0  
Tailor : Cloth :: Mechanic : ?

- Ans
- 1. Repair
  - 2. Tools
  - 3. Electricity
  - 4. Machine

Question ID : 9895808243  
Chosen Option : 1

Q.2 Find the next number in the given series.

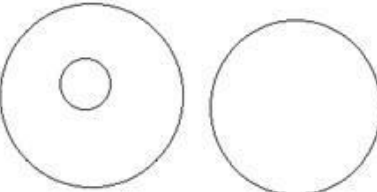
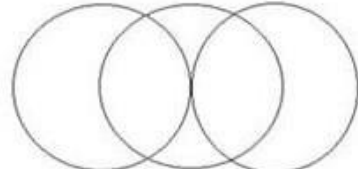

3, 14, 33, 60, ?

- Ans
- 1. 97
  - 2. 95
  - 3. 99
  - 4. 92

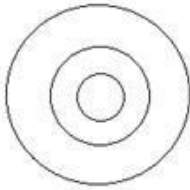
Question ID : 9895808253  
Chosen Option : 4

Q.2 Select the Venn diagram that best represents the relationship among the given set of classes:

2  
Kathmandu, Nepal, India

- Ans
- 1. 
  - 2. 
  - 3. 

✗ 4.



Question ID : 9895808263  
Chosen Option : 1

Q.2 If in a certain code language CUBA is written as 27, then in the same language how will you write the word FIJI?  
3

- Ans
- ✗ 1. 38
  - ✗ 2. 30
  - ✗ 3. 27
  - ✓ 4. 34

Question ID : 9895808246  
Chosen Option : 4

Q.2 Find the next number in the given series.  
4

12, 21, 30, 39, ?

- Ans
- ✓ 1. 48
  - ✗ 2. 50
  - ✗ 3. 44
  - ✗ 4. 41

Question ID : 9895808252  
Chosen Option : 1


Q.2 A square transparent sheet with a pattern is given. How will the pattern appear when the transparent sheet is folded  
5 along the dotted line?



Ans

- ✓ 1.
- ✗ 2.
- ✗ 3.

✗ 4.



Question ID : 9895808262  
Chosen Option : 1

Q.2  
6 'Ghumra Dance' is a folk dance associated with which Indian state?

- Ans
- ✗ 1. Jharkhand
  - ✗ 2. Assam
  - 3. West Bengal
  - ✓ 4. Odisha

Question ID : 9895807303  
Chosen Option : 3

Q.2  
7 'Drizzle' is an example of:

- Ans
- 1. precipitation
  - ✗ 2. condensation
  - 3. evaporation
  - ✗ 4. decantation

Question ID : 9895807320  
Chosen Option : 1

Q.2  
8 Which of the following is a mountain range which extends across India, Pakistan and China?

- Ans
- 1. Nilgiri
  - ✓ 2. Karakoram
  - ✗ 3. Satpura
  - ✗ 4. Aravalli

Question ID : 9895807323  
Chosen Option : 2

Q.2  
9 Which American journalist covered the Salt Satyagraha Protest in Dharsana?

- Ans
- 1. Walter Leland Cronkite
  - ✗ 2. Edward Murrow
  - ✗ 3. Carl Bernstein
  - ✓ 4. Webb Miller

Question ID : 9895807327  
Chosen Option : 4

Q.3  
0 Name the device which helps to maintain a potential difference across a conductor?

- Ans
- 1. Calliper
  - ✗ 2. eudiometer

- 3. Battery
- 4. dynamometer

Question ID : 9895807318  
Chosen Option : 3

Q.3 The process of allowing small quantities of water to reach the roots of plants either from the surface or from under the surface is:

- Ans
- 1. localized irrigation
  - 2. manual irrigation
  - 3. drip irrigation
  - 4. lateral move irrigation

Question ID : 9895807324  
Chosen Option : 1

Q.3 Which law of motion states that when one object exerts a force on another object, the second object instantaneously exerts a force back on the first?

- Ans
- 1. Newton's third law of motion
  - 2. Coulomb's Law
  - 3. Stefan's law
  - 4. Newton's second law of motion

Question ID : 9895807317  
Chosen Option : 4

Q.3 Which organization has been given the Nobel Peace Prize three times?

- Ans
- 1. World Bank
  - 2. International Labour Organization (ILO)
  - 3. United Nations (UN)
  - 4. International Committee of the Red Cross (ICRC)

Question ID : 9895807308  
Chosen Option : 4

Q.3 Which of the following is an example of marsupial?

- Ans
- 1. Kangaroo
  - 2. Zebra
  - 3. Jackal
  - 4. Tortoise

Question ID : 9895807319  
Chosen Option : 2

Q.3 In 2015, who among the following became the first Indian female player to reach the number one rank in badminton?

- Ans
- 1. Sania Nehwal
  - 2. P.V. Sindhu
  - 3. Jwala Gutta

4. Ashwini Ponappa

Question ID : 9895807306  
Chosen Option : 2

Q.3 The parliamentary system of government was adopted by India based on the constitution of which nation?

6

- Ans
- 1. United States of America
  - 2. Ireland
  - 3. United Kingdom
  - 4. Russia

Question ID : 9895807314  
Chosen Option : 4

Q.3 Which of the following is the longest river of Nepal?

7

- Ans
- 1. Karnali
  - 2. Narayani
  - 3. Rapti
  - 4. Mahakali

Question ID : 9895807322  
Chosen Option : 3

Q.3 In the context of democracies, which one of the following concepts is correct, which democracies have successfully eliminated.

8

- Ans
- 1. Economic inequality amongst people
  - 2. Differences on how marginalised sections are treated
  - 3. Idea of political inequality
  - 4. Conflicts amongst its people

Question ID : 9895807316  
Chosen Option : 1

Q.3 Who invented the oral polio vaccine?

9

- Ans
- 1. Louis Pasteur
  - 2. Jonas Salk
  - 3. Albert Sabin
  - 4. John Nash

Question ID : 9895807321  
Chosen Option : 1

Q.4 'Pawl kut' is a traditional festival associated with which state of India?

0

- Ans
- 1. Meghalaya
  - 2. Mizoram
  - 3. Sikkim
  - 4. Goa

Question ID : 9895807304  
Chosen Option : 2

Q.4 If monetary policy deals with management of interest rates and supply of money, then what does fiscal policy deal with?

1

- Ans
1. Taxation and government spending
  2. Import and export
  3. Banking
  4. Foreign trade

Question ID : 9895807311  
Chosen Option : 3

Q.4 Who is the author of the book 'Republic'?

2

- Ans
1. Immanuel Kant
  2. Plato
  3. Socrates
  4. Aristotle

Question ID : 9895807309  
Chosen Option : 4

Q.4 'Pali Canon', written in the 5<sup>th</sup> century BCE, is a text associated with which religion?

3

- Ans
1. Zoroastrianism
  2. Taoism
  3. Buddhism
  4. Jainism

Question ID : 9895807325  
Chosen Option : 3

Q.4 Who is the Secretary General of SAARC, as of January 2019?

4

- Ans
1. K.K. Singh
  2. Amjad Hussain B Sial
  3. Arjun Bahadur Thapa
  4. Abul Ahsan

Question ID : 9895807310  
Chosen Option : 4

Q.4 In which place was King Shivaji, the founder of the Maratha Empire, crowned 'Chhatrapati'?

5

- Ans
1. Raigad
  2. Pune
  3. Gingee
  4. Satara

Question ID : 9895807326  
Chosen Option : 1

Q.4 In which year did the 'Maintenance and Welfare of Parents and Senior Citizens Act' come into force in India?  
6

- Ans
- 1. 2010
  - 2. 2004
  - 3. 2005
  - 4. 2007

Question ID : 9895807315  
Chosen Option : 4

Q.4 Which player among the following has won the highest number of medals in the Olympic games?  
7

- Ans
- 1. Paavo Nurmi
  - 2. Mark Spitz
  - 3. Nadia Comaneci
  - 4. Michael Phelps

Question ID : 9895807307  
Chosen Option : 4

Q.4 'Barabati Fort' is a monument located in which state of India?  
8

- Ans
- 1. Madhya Pradesh
  - 2. Maharashtra
  - 3. West Bengal
  - 4. Odisha

Question ID : 9895807305  
Chosen Option : 3

Q.4 The WTO Agreement on Agriculture was an agreement negotiated during which round in 1993?  
9

- Ans
- 1. Paris Round
  - 2. Washington Round
  - 3. Brazil Round
  - 4. Uruguay Round

Question ID : 9895807313  
Chosen Option : 1

Q.5 Buffer stock is created to distribute food grains in poorer strata of society at a price lower than the market price, which  
0 is also as \_\_\_\_\_.

- Ans
- 1. Reduced price
  - 2. Cost price
  - 3. Fair price
  - 4. Issue price

Question ID : 9895807312  
Chosen Option : 1

Q.5  
1

Simplify :

$$14.62 - 0.5 \text{ of } (8.3 - 3.3) + 2.6 \times 4.04$$

- Ans
- 1. 22.642
  - 2. 22.624
  - 3. 24.624
  - 4. 23.624

Question ID : 9895807630  
Chosen Option : 3

Q.5 The three numbers are in the ratio  $\frac{1}{3} : \frac{2}{5} : \frac{1}{4}$ . The difference between the greatest number and the smallest number is 9.  
2 Find the numbers.

- Ans
- 1. 42, 46, 33
  - 2. 30, 34, 21
  - 3. 24, 28, 15
  - 4. 20, 24, 15

Question ID : 9895807639  
Chosen Option : 3

Q.5 A copper wire, 36 m long with diameter 2 mm, is melted to form a sphere. Then the radius of the sphere is:  
3

- Ans
- 1. 5 cm
  - 2. 3 cm
  - 3. 4 cm
  - 4. 6 cm

Question ID : 9895807649  
Chosen Option : 4

Q.5 Train A takes 6 h more than train B to cover a distance of 800 km. If the speed of train A is doubled it takes 2 h less  
4 than train B. What is the speed of train B?

- Ans
- 1. 75 km/h
  - 2. 80 km/h
  - 3. 60 km/h
  - 4. 50 km/h

Question ID : 9895807646  
Chosen Option : 3

Q.5 Simplify :

$$12 - 6.4 \div 8 + 0.7 \times 0.4$$

- Ans
- 1. 11.48
  - 2. 11.42
  - 3. 12.48
  - 4. 11.84

Question ID : 9895807629  
Chosen Option : 3



Q.5 The cost price of 32 articles is the same as the selling price of x articles. If the profit is 28%, then the value of x is:

6

- Ans  1. 15  
 2. 25  
 3. 16  
 4. 20

Question ID : 9895807637  
Chosen Option : 3

Q.5 Study the following table and answer the question based on it.

7

Expenditures of a Company (in lakh ₹) per annum over the given Years.

Year	Item of Expenditure				
	Salary	Fuel and Transport	Bonus	Interest on Loans	Taxes
1998	288	98	3.00	23.4	83
1999	342	112	2.52	32.5	108
2000	324	101	3.84	41.6	74
2001	336	133	3.68	36.4	88
2002	420	142	3.96	49.4	98

What is the average amount of bonus per year which the company had to pay during this period?

- Ans  1. ₹3.2 lakh  
 2. ₹3.4 lakh  
 3. ₹4.2 lakh  
 4. ₹3.5 lakh

Question ID : 9895807650  
Chosen Option : 3

Q.5 If 5 cm is added to the radius of a circle, then the circumference of the circle increases by:

8

- Ans  1.  $6\pi$  cm  
 2.  $5\pi$  cm  
 3.  $9\pi$  cm  
 4.  $10\pi$  cm

Question ID : 9895807648  
Chosen Option : 1

Q.5 A and B can do a piece of work in 15 days, B and C can do the same work in 20 days. If A is twice as good a worker as

9

C, find the time that C alone will take to do the work.

- Ans  1. 33 days  
 2. 60 days  
 3. 45 days  
 4. 27 days

Question ID : 9895807644  
Chosen Option : 4

Q.6 A library has an average of 480 visitors on Sundays and 222 on other days. The average number of visitors per day in a month of 30 days beginning with a Sunday is:

- Ans  1. 285  
 2. 280  
 3. 260  
 4. 265

Question ID : 9895807631  
Chosen Option : 1

Q.6 100 oranges are bought at the rate of ₹450 and sold at the rate of ₹60 per dozen. The percentage of profit or loss is:

- Ans  1.  $12\frac{1}{9}$   
 2.  $11\frac{1}{9}$   
 3. 11  
 4.  $11\frac{2}{9}$

Question ID : 9895807636  
Chosen Option : 2

Q.6 Study the following table and answer the question based on it.

2 Expenditures of a Company (in lakh ₹) per annum over the given Years.

Year	Item of Expenditure				
	Salary	Fuel and Transport	Bonus	Interest on Loans	Taxes
1998	288	98	3.00	23.4	83
1999	342	112	2.52	32.5	108
2000	324	101	3.84	41.6	74
2001	336	133	3.68	36.4	88
2002	420	142	3.96	49.4	98

Total expenditure on all these items in 1998 was approximately what percent of the total expenditure in 2001?

- Ans  1. 80.97%  
 2. 82.79%  
 3. 72.97%

✓ 4. 82.97%

Question ID : 9895807651  
Chosen Option : 4

Q.6 Two tailors X and Y are paid a total of ₹660 per week by their employer. If X is paid 120 percent of the sum paid to Y,  
3 how much is Y paid (in ₹) per week?

- Ans
- 1. 250
  - 2. 350
  - 3. 300
  - 4. 200

Question ID : 9895807635  
Chosen Option : 4

Q.6 The marked price of a watch is ₹600. A shopkeeper gives two successive discounts and sells the watch at ₹459. If the  
4 first discount is 10%, the second discount is:

- Ans
- 1. 10%
  - 2. 20%
  - 3. 15%
  - 4. 12%

Question ID : 9895807633  
Chosen Option : 3

Q.6  
5 What is 4<sup>th</sup> proportional in 9, 14 and 99?

- Ans
- 1. 541
  - 2. 145
  - 3. 451
  - 4. 154

Question ID : 9895807638  
Chosen Option : 4

Q.6 The average weight of 18 boys in a class is 52.5 kg and that of the remaining 6 boys is 44.5 kg. Find the average  
6 weights of all the boys in the class.

- Ans
- 1. 50 kg
  - 2. 51.5 kg
  - 3. 50.5 kg
  - 4. 52.5 kg

Question ID : 9895807632  
Chosen Option : 4

Q.6 A alone can do a piece of work in 12 days and B alone in 10 days. They undertook to do the work for ₹440. How much  
7 will A get?

- Ans
- 1. ₹240
  - 2. ₹150
  - 3. ₹300
  - 4. ₹200

Question ID : 9895807643

Q.6 A sum of money amounts to ₹8,000 after 5 years and ₹9,800 after 8 years at the same rate of simple interest. The rate of interest per annum is:

- Ans  1. 5%  
 2. 8%  
 3. 12%  
 4. 15%

Question ID : 9895807641  
Chosen Option : 4

Q.6 By walking  $\frac{3}{4}$  of his usual speed, a man reaches his office 30 min later than the usual time. What is the usual time he takes to reach the office?

- Ans  1. 70 min  
 2. 60 min  
 3. 80 min  
 4. 90 min

Question ID : 9895807645  
Chosen Option : 3

Q.7 Study the following table and answer the question based on it.

Expenditures of a Company (in lakh ₹) per annum over the given Years.

Year	Item of Expenditure				
	Salary	Fuel and Transport	Bonus	Interest on Loans	Taxes
1998	288	98	3.00	23.4	83
1999	342	112	2.52	32.5	108
2000	324	101	3.84	41.6	74
2001	336	133	3.68	36.4	88
2002	420	142	3.96	49.4	98

The total amount of taxes paid by the company during the given period is approximately what percent of the total amount of salary paid during this period?

- Ans  1. 26.37%  
 2. 27.47%  
 3. 25.37%  
 4. 24.47%

Question ID : 9895807652  
Chosen Option : 3

Q.7 A sum of money invested at compound interest will grow to ₹8,500 in 3 years and to ₹9,520 in 4 years. Then the rate of interest per annum is:

- Ans  1. 8%  
 2. 4%

✓ 3. 12%

✗ 4. 3%

Question ID : 9895807642  
Chosen Option : 3

Q.7  
2 Which of the following has the largest area?

- (a) A circle of radius  $\sqrt{2}$  cm
- (b) An equilateral triangle whose side is 4 cm
- (c) A triangle with sides 3 cm, 4 cm and 5 cm.
- (d) A rectangle in sides 2.5 cm by 2 cm.

Ans ✓ 1. b  
✗ 2. d  
✗ 3. c  
✗ 4. a

Question ID : 9895807647  
Chosen Option : 2

Q.7  
3 If the ratio of mean and median of a certain data is 2 : 3, then find the ratio of its mode and mean.

Ans ✗ 1. 2 : 5  
✗ 2. 4 : 3  
✓ 3. 5 : 2  
✗ 4. 3 : 2

Question ID : 9895807634  
Chosen Option : 3

Q.7  
4 The greatest number which on dividing 1861 and 2039 leaves remainders 7 and 5 respectively, is:

Ans ✗ 1. 35  
✗ 2. 12  
✓ 3. 18  
✗ 4. 24

Question ID : 9895807628  
Chosen Option : 3

Q.7  
5 Amit and Ram together have ₹1,300. On taking ₹500 from Amit, Amit will have same amount as what Ram had earlier. Find the ratio of the amounts Amit and Ram had initially.

Ans ✓ 1. 9 : 4  
✗ 2. 7 : 1  
✗ 3. 1 : 3  
✗ 4. 4 : 3

Question ID : 9895807640  
Chosen Option : 2

Q.1 Select the most appropriate word to fill in the blank.

In order to cut down on errors, a keyboard that can be \_\_\_\_\_ to suit individual typing style is needed.

- Ans
1. projected
  2. predicted
  3. shared
  4. adjusted

Question ID : 9895807982  
Chosen Option : 1

Q.2 Select the most appropriate option to fill in the blank.

Disputes destroy your happiness and distract you \_\_\_\_\_ your everyday tasks at work and home.

- Ans
1. from
  2. at
  3. off
  4. away

Question ID : 9895807964  
Chosen Option : 2

Q.3 Select the word which means the same as the group of words given.

An introduction made by the dramatist at the beginning of the play

- Ans
1. Prologue
  2. Epilogue
  3. Monologue
  4. Dialogue

Question ID : 9895807977  
Chosen Option : 3

Q.4 Select the option that means the same as the given idiom.

To kill two birds with one stone

- Ans
1. To shoo away birds
  2. To achieve two aims simultaneously
  3. To do many jobs at different places
  4. To shout at two individuals at a time

Question ID : 9895807975  
Chosen Option : 3

Q.5 From the given options, identify the segment in the sentence which contains the grammatical error.

The constitutional order on which the Indian State run is that there shall be no discrimination on the basis of religion.

Ans

- 1. on the basis of
- 2. Indian State run
- 3. there shall be
- 4. order on which

Question ID : 9895807958  
Chosen Option : 1

**Q.6** Select the most appropriate option to substitute the underlined segment in the given sentence. If there is no need to substitute it, select No improvement.

Permit me to speak the truth and I have say it without any fear.

- Ans**
- 1. No improvement
  - 2. I shall said it without any fear
  - 3. I had say it without any fear
  - 4. I will say it without any fear

Question ID : 9895807960  
Chosen Option : 2

**Q.7** Select the synonym of the given word.

BRITTLE

- Ans**
- 1. Enduring
  - 2. Delicate
  - 3. Coarse
  - 4. Durable

Question ID : 9895807971  
Chosen Option : 1

**Q.8** Select the most appropriate option to substitute the underlined segment in the given sentence. If there is no need to substitute it, select No improvement.

In case of actual requirement, there is a dearth of woman army officer in our state.

- Ans**
- 1. women army officer
  - 2. No improvement
  - 3. woman army officers
  - 4. women army officers

Question ID : 9895807961  
Chosen Option : 3

**Q.9** Select the most appropriate option to fill in the blank.

The earth \_\_\_\_\_ round the sun and not the vice-versa.

- Ans**
- 1. revolving
  - 2. revolves
  - 3. has revolve

4. revolve

Question ID : 9895807963  
Chosen Option : 4

Q.1  
0 Select the antonym of the given word.

COURTEOUS

- Ans  1. Detached  
 2. Impartial  
 3. Rude  
 4. Independent

Question ID : 9895807973  
Chosen Option : 4

Q.1  
1 Select the correctly spelt word.

- Ans  1. Emergency  
 2. Emergancy  
 3. Emargency  
 4. Emerergency

Question ID : 9895807979  
Chosen Option : 1

Q.1  
2 From the given options, identify the segment in the sentence which contains the grammatical error.

Hackers can either tampers with a random number generator or figure out the resultant number easily in case of online gaming.

- Ans  1. in case of  
 2. with a random number  
 3. figure out  
 4. Hackers can either tampers

Question ID : 9895807959  
Chosen Option : 4

Comprehension:



In the following passage some words have been deleted. Fill in the blanks with the help of the alternatives given.

Violence is an expression of aggression. There can be various reasons that cause this kind of behaviour. Various (1) \_\_\_\_\_ social situations or circumstances in life affect an individual adversely. The reaction to those situations is (2) \_\_\_\_\_. Those who are short tempered or are unable to cope with the changing environment find it hard to behave (3) \_\_\_\_\_. This frustration comes out in the form of anger and violent behaviour. Though, environmental factors are responsible but only to an (4) \_\_\_\_\_. Psychologists believe that violent traits are (5) \_\_\_\_\_ in nature and are likely to surface sooner or later.

SubQuestion No : 13

Q.1  
3 Select the most appropriate option that will fill in the blank number 1.

- Ans
- 1. favourable
  - 2. destined
  - 3. lucky
  - 4. unfavourable

Question ID : 9895807966  
Chosen Option : 3

Comprehension:

In the following passage some words have been deleted. Fill in the blanks with the help of the alternatives given.

Violence is an expression of aggression. There can be various reasons that cause this kind of behaviour. Various (1) \_\_\_\_\_ social situations or circumstances in life affect an individual adversely. The reaction to those situations is (2) \_\_\_\_\_. Those who are short tempered or are unable to cope with the changing environment find it hard to behave (3) \_\_\_\_\_. This frustration comes out in the form of anger and violent behaviour. Though, environmental factors are responsible but only to an (4) \_\_\_\_\_. Psychologists believe that violent traits are (5) \_\_\_\_\_ in nature and are likely to surface sooner or later.

SubQuestion No : 14

Q.1  
4 Select the most appropriate option that will fill in the blank number 2.

- Ans
- 1. agreeable
  - 2. indecisive
  - 3. suitable
  - 4. pleasant

Question ID : 9895807967  
Chosen Option : 3

Comprehension:

In the following passage some words have been deleted. Fill in the blanks with the help of the alternatives given.

Violence is an expression of aggression. There can be various reasons that cause this kind of behaviour. Various (1) \_\_\_\_\_ social situations or circumstances in life affect an individual adversely. The reaction to those situations is (2) \_\_\_\_\_. Those who are short tempered or are unable to cope with the changing environment find it hard to behave (3) \_\_\_\_\_. This frustration comes out in the form of anger and violent behaviour. Though, environmental factors are responsible but only to an (4) \_\_\_\_\_. Psychologists believe that violent traits are (5) \_\_\_\_\_ in nature and are likely to surface sooner or later.

SubQuestion No : 15

Q.1  
5 Select the most appropriate option that will fill in the blank number 3.

- Ans
- 1. harshly
  - 2. negatively
  - 3. rationally
  - 4. eagerly

Question ID : 9895807968  
Chosen Option : 4

Comprehension:

In the following passage some words have been deleted. Fill in the blanks with the help of the alternatives given.

Violence is an expression of aggression. There can be various reasons that cause this kind of behaviour. Various (1) \_\_\_\_\_ social situations or circumstances in life affect an individual adversely. The reaction to those situations is (2) \_\_\_\_\_. Those who are short tempered or are unable to cope with the changing environment find it hard to behave (3) \_\_\_\_\_. This frustration comes out in the form of anger and violent behaviour. Though, environmental factors are responsible but only to an (4) \_\_\_\_\_. Psychologists believe that violent traits are (5) \_\_\_\_\_ in nature and are likely to surface sooner or later.

SubQuestion No : 16

Q.1  
6 Select the most appropriate option that will fill in the blank number 4.

- Ans
- 1. range
  - 2. extent
  - 3. end
  - 4. intent

Question ID : 9895807969  
Chosen Option : 3

Comprehension:

In the following passage some words have been deleted. Fill in the blanks with the help of the alternatives given.

Violence is an expression of aggression. There can be various reasons that cause this kind of behaviour. Various (1) \_\_\_\_\_ social situations or circumstances in life affect an individual adversely. The reaction to those situations is (2) \_\_\_\_\_. Those who are short tempered or are unable to cope with the changing environment find it hard to behave (3) \_\_\_\_\_. This frustration comes out in the form of anger and violent behaviour. Though, environmental factors are responsible but only to an (4) \_\_\_\_\_. Psychologists believe that violent traits are (5) \_\_\_\_\_ in nature and are likely to surface sooner or later.

SubQuestion No : 17

Q.1  
7 Select the most appropriate option that will fill in the blank number 5.

- Ans
- 1. general
  - 2. extrinsic
  - 3. common
  - 4. inherent

Question ID : 9895807970  
Chosen Option : 2

Q.1  
8 Select the synonym of the given word.

ADORN

- Ans
- 1. Decorate
  - 2. Create
  - 3. Produce
  - 4. Generate

Question ID : 9895807972  
Chosen Option : 2

Q.1  
9 Select the antonym of the given word.

FUTILE

- Ans
- 1. Common
  - 2. Mutual
  - 3. Collective
  - 4.

Question ID : 9895807974  
Chosen Option : 2

Q.2  
0 Select the option that means the same as the given idiom.

To bell the cat

- Ans  1. To take a lead in difficult situations  
 2. To be alert to danger anywhere  
 3. To tie a bell for a cat at home  
 4. To catch a cat and bell it first

Question ID : 9895807976  
Chosen Option : 4

Q.2  
1 Select the most appropriate word to fill in the blank.

When the bat pays attention to an object, the \_\_\_\_\_ of that object sharpens in its brain.

- Ans  1. portrait  
 2. appearance  
 3. depiction  
 4. representation

Question ID : 9895807981  
Chosen Option : 2

Q.2  
2 Select the word which means the same as the group of words given.

A poem of serious reflection, typically a lament for the dead.

- Ans  1. Elegy  
 2. Ballad  
 3. Sonnet  
 4. Hymn

Question ID : 9895807978  
Chosen Option : 3

Q.2  
3 From the given options, identify the segment in the sentence which contains the grammatical error.

Animals experience feelings of love and they also protect their young ones from difficulties as human does.

- Ans  1. they also protect  
 2. Animals experience  
 3. feelings of love  
 4. as human does

Question ID : 9895807957  
Chosen Option : 4

Q.2  
4

Select the most appropriate option to substitute the underlined segment in the given sentence. If there is no need to substitute it, select No improvement.

The family had been without food for four days.

- Ans
1. family is been
  2. family are been
  3. No improvement
  4. family is being

Question ID : 9895807962  
Chosen Option : 1

Q.2  
5 Select the correctly spelt word.

- Ans
1. Tution
  2. Tuition
  3. Tuitoin
  4. Tuiton

Question ID : 9895807980  
Chosen Option : 2

Section : Hindi Language

Q.1 दिए गए वाक्य का वह भाग जात करें जिसमें कोई त्रुटि है।

भारत ने अन्य राष्ट्रों को नैतिक मूल्यों का पालन करने का प्रेरणा दी है।

- Ans
1. करने का प्रेरणा दी है।
  2. अन्य राष्ट्रों को
  3. भारत ने
  4. नैतिक मूल्यों का पालन

Question ID : 9895806737  
Chosen Option : --

Q.2 दिए गए शब्द का विलोम चुनें।

विराम

- Ans
1. अशून्य
  2. शांत
  3. शून्य
  4. गति

Question ID : 9895806751  
Chosen Option : --

Q.3

रिक्त स्थान को भरने के लिए उपयुक्त शब्द का चयन करें।

मुझे खेद है \_\_\_\_\_ मैं देर से पहुँचा।

Ans

1. परंतु
2. यदि
3. कि
4. किंतु

Question ID : 9895806741  
Chosen Option : --

Q.4 सही वर्तनी वाले शब्द का चयन करें।

Ans

1. स्वादिष्ठ
2. स्वद्धिस्ट
3. स्वदिस्ट
4. स्वादिश्ट

Question ID : 9895806760  
Chosen Option : --

Q.5 दिए गए शब्द के पर्यायवाची शब्द का चयन करें।

अंधकार

Ans

1. तिमिर
2. नीरस
3. गहरा
4. निवेदन

Question ID : 9895806754  
Chosen Option : --

Q.6 दिए गए शब्द के पर्यायवाची शब्द का चयन करें।

सूर्य

Ans

1. दिवाकर
2. प्रार्थना
3. सेवक
4. अभिन्न

Question ID : 9895806753  
Chosen Option : --



Q.7 निम्नलिखित में से उस विकल्प का चयन करें जो 'श्री गणेश करना' मुहावरे का अर्थ व्यक्त करता है।

Ans

1. कार्य आरंभ करना
2. कार्य सम्पन्न होना
3. श्री गणेश का पूजन करना
4. पालन करना

Question ID : 9895806755

Chosen Option : --

Q.8 दिए गए वाक्य में रेखांकित खंड को प्रतिस्थापित करने के लिए उपयुक्त विकल्प का चयन करें।

सार में परिष्कृत रचना के गुणों का होना आवश्यक है।

Ans

1. पल्लवन
2. प्रतिवेदन
3. टिप्पण
4. संक्षेपण

Question ID : 9895806739

Chosen Option : --

Q.9 सही वर्तनी वाले शब्द का चयन करें।

Ans

1. इत्यादी
2. ईत्यादी
3. इत्यादि
4. इतयादि

Question ID : 9895806759

Chosen Option : --

Q.10 रिक्त स्थान को भरने के लिए उपयुक्त शब्द का चयन करें।

तालाब में उगा \_\_\_\_\_ बहुत सुंदर लगता है।

Ans

1. चन्द्रमा
2. सूरज
3. कमल
4. घास

Question ID : 9895806742

Chosen Option : --

Comprehension:

निम्नलिखित गद्यांश के रिक्त स्थानों की पूर्ति गद्यांश के नीचे दिए गए प्रश्नों के अनुसार कीजिए-

बैसाखी उत्तर भारत का प्रमुख \_\_\_\_\_ (1) है। यह त्योहार पंजाब, हरियाणा, हिमाचल और दिल्ली में विशेष रूप से \_\_\_\_\_ (2) जाता है। इस दिन को रबी की फसल तैयार होने की \_\_\_\_\_ (3) में मनाया जाता है। इसलिए इसे कृषि पर्व भी कहा जाता है। इस दिन जगह-जगह \_\_\_\_\_ (4) लगते हैं। इस दिन खालसा पंथ की स्थापना की खुशी में पंच प्यारों को याद करते हुए \_\_\_\_\_ (5) निकाले जाते हैं।

SubQuestion No : 11

Q.1  
1 गद्यांश में संकेतित रिक्त स्थान (1) के लिए उपयुक्त शब्द होगा।

Ans

1. आनंद
2. त्योहार
3. हथियार
4. बाज़ार

Question ID : 9895806746  
Chosen Option : --

Comprehension:

निम्नलिखित गद्यांश के रिक्त स्थानों की पूर्ति गद्यांश के नीचे दिए गए प्रश्नों के अनुसार कीजिए-

बैसाखी उत्तर भारत का प्रमुख \_\_\_\_\_ (1) है। यह त्योहार पंजाब, हरियाणा, हिमाचल और दिल्ली में विशेष रूप से \_\_\_\_\_ (2) जाता है। इस दिन को रबी की फसल तैयार होने की \_\_\_\_\_ (3) में मनाया जाता है। इसलिए इसे कृषि पर्व भी कहा जाता है। इस दिन जगह-जगह \_\_\_\_\_ (4) लगते हैं। इस दिन खालसा पंथ की स्थापना की खुशी में पंच प्यारों को याद करते हुए \_\_\_\_\_ (5) निकाले जाते हैं।

SubQuestion No : 12

Q.1  
2 गद्यांश में संकेतित रिक्त स्थान (2) के लिए उपयुक्त शब्द होगा।

Ans

1. कराया
2. बनाया
3. लगाया
4. मनाया

Question ID : 9895806747  
Chosen Option : --

Comprehension:

निम्नलिखित गद्यांश के रिक्त स्थानों की पूर्ति गद्यांश के नीचे दिए गए प्रश्नों के अनुसार कीजिए-

बैसाखी उत्तर भारत का प्रमुख \_\_\_\_\_ (1) है। यह त्योहार पंजाब, हरियाणा, हिमाचल और दिल्ली में विशेष रूप से \_\_\_\_\_ (2) जाता है। इस दिन को रबी की फसल तैयार होने की \_\_\_\_\_ (3) में मनाया जाता है। इसलिए इसे कृषि पर्व भी कहा जाता है। इस दिन जगह-जगह \_\_\_\_\_ (4) लगते हैं। इस दिन खालसा पंथ की स्थापना की खुशी में पंच प्यारों को याद करते हुए \_\_\_\_\_ (5) निकाले जाते हैं।

SubQuestion No : 13

Q.1  
3 गद्यांश में संकेतित रिक्त स्थान (3) के लिए उपयुक्त शब्द होगा।

- Ans
1. शौक
  2. हँसी
  3. गम
  4. खुशी

Question ID : 9895806748  
Chosen Option : --

Comprehension:

निम्नलिखित गद्यांश के रिक्त स्थानों की पूर्ति गद्यांश के नीचे दिए गए प्रश्नों के अनुसार कीजिए-

बैसाखी उत्तर भारत का प्रमुख \_\_\_\_\_ (1) है। यह त्योहार पंजाब, हरियाणा, हिमाचल और दिल्ली में विशेष रूप से \_\_\_\_\_ (2) जाता है। इस दिन को रबी की फसल तैयार होने की \_\_\_\_\_ (3) में मनाया जाता है। इसलिए इसे कृषि पर्व भी कहा जाता है। इस दिन जगह-जगह \_\_\_\_\_ (4) लगते हैं। इस दिन खालसा पंथ की स्थापना की खुशी में पंच प्यारों को याद करते हुए \_\_\_\_\_ (5) निकाले जाते हैं।

SubQuestion No : 14

Q.1  
4 गद्यांश में संकेतित रिक्त स्थान (4) के लिए उपयुक्त शब्द होगा।

- Ans
1. जमघट
  2. सम्मेलन
  3. रैली
  4. मेले

Comprehension:

निम्नलिखित गद्यांश के रिक्त स्थानों की पूर्ति गद्यांश के नीचे दिए गए प्रश्नों के अनुसार कीजिए-

बैसाखी उत्तर भारत का प्रमुख \_\_\_\_\_ (1) है। यह त्योहार पंजाब, हरियाणा, हिमाचल और दिल्ली में विशेष रूप से \_\_\_\_\_ (2) जाता है। इस दिन को रबी की फसल तैयार होने की \_\_\_\_\_ (3) में मनाया जाता है। इसलिए इसे कृषि पर्व भी कहा जाता है। इस दिन जगह-जगह \_\_\_\_\_ (4) लगते हैं। इस दिन खालसा पंथ की स्थापना की खुशी में पंच प्यारों को याद करते हुए \_\_\_\_\_ (5) निकाले जाते हैं।

SubQuestion No : 15

Q.1  
5 गद्यांश में संकेतित रिक्त स्थान (5) के लिए उपयुक्त शब्द होगा।

- Ans
1. विज्ञापन
  2. जुलूस
  3. प्रदर्शन
  4. लीला

Q.1  
6 दिए गए शब्द का विलोम चुनें।

सुकर

- Ans
1. दुष्कर
  2. दुकर
  3. पुष्कर
  4. निराकार

Q.1  
7 दिए गए वाक्य का वह भाग ज्ञात करें जिसमें कोई त्रुटि है।

विज्ञान की प्रगति से मनुष्य की समस्याओं में कमी आया है।

- Ans
1. मनुष्य की समस्याओं में
  2. कमी आया है।

- ✓ 3. विज्ञान की  
4. प्रगति से

Question ID : 9895806735  
Chosen Option : --

Q.1 निम्नलिखित में से उस विकल्प का चयन करें जो 'टेढ़ी खीर होना' मुहावरे का अर्थ व्यक्त करता है।

- Ans
1. टेढ़े होकर खीर खाना
  2. खीर खराब होना
  3. कार्य का बहुत कठिन होना
  4. असंभव कार्य

Question ID : 9895806756  
Chosen Option : --

Q.1 रिक्त स्थान को भरने के लिए उपयुक्त शब्द का चयन करें।

दीपक \_\_\_\_\_ परिश्रमी है।

- Ans
1. सब द्वारा
  - ✗ 2. सबका
  3. सबसे
  - ✗ 4. सब पर

Question ID : 9895806744  
Chosen Option : --

Q.2\_0 दिये गये वाक्यांश के लिए एक शब्द दीजिये।

ऊपर लिखी हुई

- Ans
1. निम्नलिखित
  2. अलिखित
  3. उल्लिखित
  4. अधोलिखित

Question ID : 9895806758  
Chosen Option : --

Q.2\_1 दिए गए वाक्य का वह भाग ज्ञात करें जिसमें कोई त्रुटि है।

भारत जैसा सहिष्णुता और उदारता से ही विश्वशांति संभव है।

- Ans
1. से ही विश्वशांति
  - ✗ 2. सहिष्णुता और उदारता

3. संभव है।
4. भारत जैसा

Question ID : 9895806736  
Chosen Option : --

Q.2  
2 दिए गए वाक्य में रेखांकित खंड को प्रतिस्थापित करने के लिए उपयुक्त विकल्प का चयन करें।

यह सिद्धांत हमारी विरासत का एक अंश है।

- Ans
1. मौका
  2. भाग
  3. कुल
  4. परिवार

Question ID : 9895806740  
Chosen Option : --

Q.2  
3 रिक्त स्थान को भरने के लिए उपयुक्त शब्द का चयन करें।

मिठाइयों पर \_\_\_\_\_ बैठी हैं।

- Ans
1. चूहे
  2. मक्खियाँ
  3. तितलियाँ
  4. गिरगिट

Question ID : 9895806743  
Chosen Option : --

Q.2  
4 दिए गए वाक्य में रेखांकित खंड को प्रतिस्थापित करने के लिए उपयुक्त विकल्प का चयन करें।

दोनों में से किसी की उपेक्षा नहीं की जा सकती।

- Ans
1. तिरस्कार
  2. इच्छा
  3. निरादर
  4. अवहेलना

Question ID : 9895806738  
Chosen Option : --

Q.2  
5 दिये गये वाक्यांश के लिए एक शब्द दीजिये।

जो करने योग्य न हो

- Ans
1. दर्शनीय
  2. शोभनीय

✘ 3. अकरणीय

✔ 4. रमणीय

Question ID : 9895806757  
Chosen Option : --

## Constable (GD) in CAPFs, NIA, SSF and Rifleman (GD) in Assam Rifles Examination, 2018

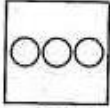
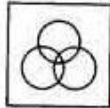

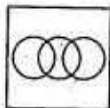
Roll No. :	
Registration No.	
Name :	
Exam Venue :	iON Digital Zone Chikalhana
Exam Time :	4:00 PM - 5:30 PM
Exam Date :	02/03/2019

Section : General Section

**Q.1** Select the Venn diagram that best illustrates the relationship between the three given classes.

Engineers, Men, Married

Ans

- 1. 
- 2. 
- 3. 
- 4. 

Question ID : 9895808288

Chosen Option : 2

**Q.2**

Select the correct option that will fill in the blank and complete the series.

8, 9, 13, 22, 38, \_\_\_\_\_.

Ans

- 1. 50
- 2. 71
- 3. 63
- 4. 55

Question ID : 9895808277

Chosen Option : 3

**Q.3**

P, M, D, A, F, H, R and B are sitting around a circle facing at the centre. R is fourth to the right of A, who is third to the right of P. M is second to the left of H, who is second to the left of P. D is third to the right of B.

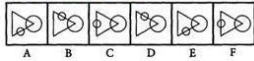
Ans

- 1. B to the left of H?
- 2. M
- 3. A
- 4. F



Q.4 Identify the two figures from the following set of figures which are out of position and require interchange of positions to put the entire series in order.

Question Figure:



- Ans
- 1. D,E
  - 2. B,F
  - 3. D,F
  - 4. C,D

Q.5 Four options have been given out of which three are alike in some manner, while one is different. Choose the odd one.

- Ans
- 1. (28, 63)
  - 2. (14, 44)
  - 3. (27, 57)
  - 4. (15, 45)

Q.6 The statements below are followed by two conclusions labeled I and II. Assuming that the information in the statements is true, even if it appears to be at variance with generally established facts, decide which conclusion(s) logically and definitely follow(s) from the information given in the statements.

Statements:

Some bottle-gourd are Cabbage  
All Capsicum are Cabbage  
Some Cabbage are Cucumber

Conclusions:

- I. Some Bottle-gourd are Capsicum
- II. Some Cucumber are Cabbage

- Ans
- 1. If only conclusion I follow
  - 2. If either conclusion I or II follows
  - 3. If only conclusion II follows
  - 4. If neither conclusion I nor II follows

Q.7 If K means  $\times$ , H means  $\div$ , M means  $+$  and N means  $-$ , then what is the value of

13 K 7 H 22.75 M 27 N 13?

- Ans
- 1. 19
  - 2. 22
  - 3. 18
  - 4. 17

**Q.8** The statements below are followed by three conclusions labeled I, II and III. Assuming that the information in the statements is true, even if it appears to be at variance with generally established facts, decide which conclusion(s) logically and definitely follow(s) from the information given in the statements.

**Statements:**

- I. All sparrows are parrots.
- II. All parrots are birds.

**Conclusion:**

- I. No sparrows are birds
- II. No birds are sparrows
- III. Some birds are sparrows

**Ans** 1. Only conclusion II follows

2. All conclusions follow

3. Only conclusion I follows

4. Only conclusion III follows

Question ID : 9895808276  
Chosen Option : 3

**Q.9** Select the correct option that will fill in the blank and complete the series.

AP, DQ, HR, MS, ST, ZU, \_\_\_\_\_

**Ans**  1. GV

2. HW

3. FS

4. HV

Question ID : 9895808264  
Chosen Option : 1

**Q.1** A, B, C, D, E, F, G and H are sitting around a round table facing the centre. D is fourth to the right of H and second to the left of B. F is fourth to the right of B. C is fourth to the right of E, who is not an immediate right of B or D. A is not an immediate neighbour of D.

What is B's position with respect to G when counted from G's right?

**Ans** 1. Fourth to the right

2. Third to the right

3. Second to the right

4. Fifth to the right

Question ID : 9895808273  
Chosen Option : 2

**Q.1** Select the correct option that will fill in the blank and complete the series.

1330, 728, 342, 124, \_\_\_\_\_.

**Ans**  1. 35

2. 48

3. 24

4. 26

Question ID : 9895808278  
Chosen Option : 3

**Q.1**

2 In a certain code 'READY' is written as '\$#2\*©' and 'ENJOY' is written as '#64@%'. How is 'NEAR' written in that code?

- Ans
1. 6#2\$
  2. 6\$2#
  3. #62\$
  - ✗ 4. #2@#

Question ID : 9895808270

Chosen Option : 1

Q.1 Saurabh is taller than Sandeep, Amit is taller than Saurabh. Subhash is taller than Amit. Sattu is tallest of all. If they stand according to their height who will be exactly in the middle?

- 3
- Ans
1. Sandeep
  - ✗ 2. Subhash
  - ✗ 3. Saurabh
  - ✓ 4. Amit

Question ID : 9895808274

Chosen Option : 1

Q.1 Select the option that is related to the fourth term in the same way as the first term is related to the second term.

4  
Friend : Enemy :: ? : Hatred

- Ans
1. Empathy
  - ✓ 2. Love
  - ✗ 3. Anger
  - ✗ 4. Mercy

Question ID : 9895808268

Chosen Option : 1

Q.1 Four letters have been given out of which three are alike in some manner, while one is different. Choose the odd one.

- 5
- Ans
- ✓ 1. I
  - ✗ 2. J
  - ✗ 3. Y
  - ✗ 4. Q

Question ID : 9895808265

Chosen Option : 2

Q.1 Select the option that is related to the third term in the same way as the second term is related to the first term.

6  
Water : Ocean :: Air : ?

- Ans
1. Earth
  2. Sea
  3. Vacuum
  4. Atmosphere

Question ID : 9895808267

Chosen Option : 4

Q.1  
7 If A is coded as 1, CAT is coded as 24, then MAINS will be coded as:

- Ans
- 1. 52
  - 2. 57
  - 3. 50
  - 4. 56

Question ID : 9895808271  
Chosen Option : 4

Q.1  
8 Select the option that is related to the fourth term in the same way as the first term is related to the second term.


4 : 52 :: ? : 1560

- Ans
- 1. 128
  - 2. 120
  - 3. 118
  - 4. 122

Question ID : 9895808279  
Chosen Option : 4

Q.1  
9 Which of the following answer figure will complete the given figure?

Questions Figure:

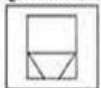


- Ans
- 1.
  - 2.
  - 3.
  - 4.

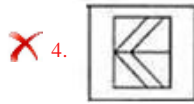
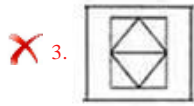
Question ID : 9895808284  
Chosen Option : 3

Q.2  
0 Choose the option figure in which the given figure is hidden/embedded.

Questions Figure:



- Ans
- 1.
  - 2.



Question ID : 9895808285  
Chosen Option : 1

Q.2 Four words have been given out of which three are alike in some manner, while one is different. Choose the odd one.  
1

- Ans  1. Pup  
 2. Cub  
 3. Goat  
 4. Kitten

Question ID : 9895808266  
Chosen Option : 2

Q.2 Find the missing number from the below options.  
2



- Ans  1. 3  
 2. 9  
 3. 8  
 4. 7

Question ID : 9895808281  
Chosen Option : 3

Q.2 Choose the option that most closely resembles the mirror image of the given figure when mirror is placed at right side.  
3

Questions Figure:



- Ans  1.
- 2.
- 3.
- 4.

Question ID : 9895808286  
Chosen Option : 2

Q.2 Select the option that is related to the third term in the same way as the second term is related to the first term.

4

QPRS : TUVW :: JKLI : ?

Ans

1. MNPO
2. MNOP
3. NMOF
4. NMPO

Question ID : 9895808269  
Chosen Option : 1

Q.2 A piece of paper is shown below. From the given answer figures, indicate how it will appear when it is folded?

5

Questions Figure:



Ans

- 1.
- 2.
- 3.
- 4.

Question ID : 9895808287  
Chosen Option : 4

Q.2 Which chemical compound in a chili gives it the characteristic pungent/spicy taste?

6

Ans

1. Allicin
2. Capsaicin
3. Cerium hydroxide
4. Cerium sulphate

Question ID : 9895807343  
Chosen Option : 3

Q.2 'Navlakha Palace' is a heritage site located in which state of India?

7

Ans

1. West Bengal
2. Madhya Pradesh
3. Uttar Pradesh
4. Bihar

Question ID : 9895807330  
Chosen Option : 1

Q.2  
8 When does a budget deficit occur?

- Ans
1. Government is spending less than available revenue
  2. Government is spending more than available revenue
  3. Government is spending equal to available revenue
  4. Government is spending a fixed minimum of available revenue

Question ID : 9895807337  
Chosen Option : 2

Q.2  
9 Which Indian, who is fondly called the Waterman of India, has won the Stockholm Water Prize?

- Ans
1. Dr Verghese Kurien
  2. Rajanikant Arole
  3. Dr Rajendra Singh
  4. Vedaratnam Appakutti

Question ID : 9895807333  
Chosen Option : 3

Q.3  
0 In which year did Subhash Chandra Bose declare the formation of the Provisional Government of Free India?

- Ans
1. 1943
  2. 1941
  3. 1945
  4. 1942

Question ID : 9895807352  
Chosen Option : 3

Q.3  
1 The first AIBA Legends Award went to which Indian sportsperson in 2016?

- Ans
1. P.V. Sindhu
  2. MC Mary Kom
  3. Sachin Tendulkar
  4. Sania Mirza

Question ID : 9895807335  
Chosen Option : 2

Q.3  
2 Which music maestro was awarded Padma Vibhushan in 2018?

- Ans
1. Hariprasad Chaurasia
  2. A. R. Rahman
  3. Shivkumar Sharma
  4. Ilayaraja

Question ID : 9895807329  
Chosen Option : 1

Q.3  
3 Identify the arboreal animal from the given options.

- Ans
1. Hippopotamus
  2. Monkey
  3. Rhino
  4. Giraffe

Question ID : 9895807344  
Chosen Option : 2

Q.3  
4 Which of the following players has remained world's number one tennis player for the longest number of years?

- Ans
1. Jimmy Connors
  2. Ivan Lendl
  3. Pete Sampras
  4. Roger Federer

Question ID : 9895807332  
Chosen Option : 2

Q.3  
5 The theme state for the 33<sup>rd</sup> Suraj kund mela 2019 is \_\_\_\_\_.

- Ans
1. Gujrat
  2. Kerala
  3. Maharashtra
  4. Bihar

Question ID : 9895807328  
Chosen Option : 3

Q.3  
6 The federal form of government was adopted based on the constitution of which country?

- Ans
1. United States of America
  2. Ireland
  3. Russia
  4. United Kingdom

Question ID : 9895807339  
Chosen Option : 1

Q.3  
7 What type of cultivation is practised in areas of thick vegetation, heavy rainfall and quick regeneration?

- Ans
1. Shifting
  2. Subsistence
  3. Plantation
  4. Nomadic

Question ID : 9895807348  
Chosen Option : 2

Q.3  
8 Which of the following nation has the largest aged population as of 2017?

Ans



1. Italy
2. Germany
3. Portugal
4. Japan

Question ID : 9895807349  
Chosen Option : 3

Q.3  
9 The national emblem of India was adopted on \_\_\_\_\_.

- Ans
1. January 26, 1947
  2. January 26, 1950
  3. August 26, 1950
  4. August 15, 1947

Question ID : 9895807341  
Chosen Option : 1

Q.4  
0 \_\_\_\_\_ resources are those whose quantity is known.

- Ans
1. Potential
  2. Original
  3. Actual
  4. Non renewable

Question ID : 9895807347  
Chosen Option : 2

Q.4  
1 A man walking on a tightrope uses which law/laws of physics?

- Ans
1. Hooke's law
  2. Stefan's law
  3. Coulomb's law
  4. Newton's laws of motion

Question ID : 9895807342  
Chosen Option : 2

Q.4  
2 When was the Dowry Prohibition Act passed in India?

- Ans
1. 1945
  2. 1950
  3. 1961
  4. 1966

Question ID : 9895807340  
Chosen Option : 4

Q.4  
3 When was the Battle of Giria fought in West Bengal?

- Ans
1. 1723
  2. 1740

3. 1754

4. 1711

Question ID : 9895807351  
Chosen Option : 3

Q.4  
4 When was the National Rural Health Mission started?

Ans  1. 2002

2. 2007

3. 2010

4. 2005

Question ID : 9895807346  
Chosen Option : 3

Q.4  
5 Who was the first Indian and also the first Asian to win the World Junior Chess Championship in 1987?

Ans 1. M.S. Thejkumar

2. Nihal Sarin

3. Aryan Chopra

4. Viswanathan Anand

Question ID : 9895807331  
Chosen Option : 3

Q.4  
6 The place where Adi Shankara was born lies in which present-day state of India?

Ans  1. Kerala

2. Tamil Nadu

3. Maharashtra

4. Karnataka

Question ID : 9895807350  
Chosen Option : 3

Q.4  
7 \_\_\_\_\_ ultimately decides the growth rate of the country.

Ans 1. Quality of the population

2. Quantity of the population

3. Life expectancy of the population

4. Literacy of the population

Question ID : 9895807336  
Chosen Option : 4

Q.4  
8 What do you call a breeze blowing towards the sea from the land, especially at night?

Ans  1. Land breeze

2. Water breeze

3. Tidal breeze

4. Sea breeze

Question ID : 9895807345  
Chosen Option : 1

Q.4  
9 'Life Divine' is a book written by:

- Ans  1. Sri Aurobindo  
 2. Ram Mohan Roy  
 3. Ishwarchandra Vidya Sagar  
 4. Vivekananda

Question ID : 9895807334  
Chosen Option : 2

Q.5  
0 US and EU complained of sugarcane and pulses MSP to which organization?

- Ans  1. IMF  
 2. WTO  
 3. United Nations  
 4. World Bank

Question ID : 9895807338  
Chosen Option : 2

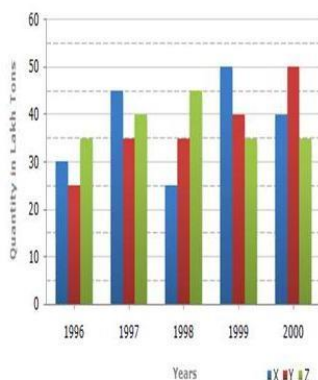
Q.5  
1 By giving ₹20 to M, A would have the amount equal to what M had earlier. If the sum of the amounts with A and M is ₹220, what is the ratio of the amount with A to that with M earlier?

- Ans  1. 6 : 5  
 2. 2 : 1  
 3. 5 : 6  
 4. 7 : 6

Question ID : 9895807663  
Chosen Option : 2

Q.5  
2 Study the bar graph given below that shows the data of the production of paper (in lakh tonnes) by three different companies X, Y and Z over the years and answer the question.

Production of Paper (in lakh tonnes) by Three Companies X, Y and Z over the Years.



The average production for five years was minimum for which company?

- Ans  1. Z  
 2. Y  
 3. X  
 4. X and Z both

Question ID : 9895807676  
Chosen Option : 2

Q.5 A  $11\text{ cm} \times 4\text{ cm}$  rectangular piece of paper is folded and taped without overlapping to make a cylinder of height 4 cm.  
3 Then the volume of the cylinder so formed is:

- Ans
- 1.  $385\text{ cm}^3$
  - 2.  $3.85\text{ cm}^3$
  - 3.  $38.5\text{ cm}^3$
  - 4.  $0.385\text{ cm}^3$

Question ID : 9895807672  
Chosen Option : 2

Q.5 The ratio of two numbers is 3 : 5. If each number is decreased by 10, the ratio becomes 5 : 9. Find the numbers.  
4

- Ans
- 1. 60, 100
  - 2. 90, 150
  - 3. 21, 35
  - 4. 30, 50

Question ID : 9895807664  
Chosen Option : 4

Q.5 Three candidates contested an election and received 1148, 7624 and 11628 votes respectively. What percentage of the  
5 total votes did the winning candidate get?

- Ans
- 1. 65%
  - 2. 90%
  - 3. 57%
  - 4. 60%

Question ID : 9895807660  
Chosen Option : 2

Q.5 The sides of a triangle are 5 cm, 12 cm and 13 cm. A rectangle is constructed which has the area equal to the area of the  
6 triangle and has the width 5 cm. Then the perimeter of the rectangle is:

- Ans
- 1. 22 cm
  - 2. 11 cm
  - 3. 30 cm
  - 4. 33 cm

Question ID : 9895807673  
Chosen Option : 3

Q.5 The numerical value of perimeter of an equilateral triangle is  $\sqrt{3}$  times the area of the triangle. Then the length of each  
7 side of the equilateral triangle is:

- Ans
- 1. 6 cm
  - 2. 4 cm
  - 3. 5 cm
  - 4. 3 cm

Question ID : 9895807674  
Chosen Option : 4

Q.5 The compound interest on ₹1,800 at 10% p.a. for a certain period of time is ₹378. Then the period of time in years is:

8

- Ans
- 1. 2 years
  - 2. 3 years
  - 3.  $2\frac{1}{2}$  years
  - 4.  $3\frac{1}{2}$  years

Question ID : 9895807667

Chosen Option : 4

Q.5 Sam borrowed some money from his friend at simple interest of 6% per annum. He returned his friend ₹18,200. After

9 how much time did Sam return the money if he borrowed ₹14,000?

- Ans
- 1. 8 years
  - 2. 2.5 years
  - 3. 3.5 years
  - 4. 5 years

Question ID : 9895807666

Chosen Option : 2

Q.6 A pupil's marks were wrongly entered as 87 instead of 62. Due to that the average marks for the class got increased by

0 half ( $\frac{1}{2}$ ). The number of pupils in the class is:

- Ans
- 1. 45
  - 2. 50
  - 3. 40
  - 4. 25

Question ID : 9895807657

Chosen Option : 3

Q.6 The selling price of 50 apples is equal to cost price of 45 apples. Find the profit or loss obtained

1

- Ans
- 1. Gain of 10%
  - 2. Gain of 12%
  - 3. Loss of 12%
  - 4. Loss of 10%

Question ID : 9895807662

Chosen Option : 1

Q.6 Two trains of length 200 m and 300 m respectively are running in opposite directions on parallel tracks. If their speeds

2 are 40 km/h and 50 km/h, then the time taken by the trains to cross each other is:

- Ans
- 1. 50 s
  - 2. 30 s
  - 3. 40 s
  - 4. 20 s

Question ID : 9895807670

Chosen Option : 4

Q.6 A, B and C together can do a work in 4 days. If A and B can do the work in 5 days, B and C in 10 days, find the days

3 taken by A and C to do the work.

- Ans  1. 5 days  
 2. 4 days  
 3. 8 days  
 4. 6 days

Question ID : 9895807668  
Chosen Option : 1

Q.6 The least number which, when divided by 5, 6, 7 and 8 leaves a remainder 4, but when divided by 4 leaves no remainder, is:

- Ans  1. 844  
 2. 1684  
 3. 840  
 4. 846

Question ID : 9895807653  
Chosen Option : 3

Q.6 Simplify:

$$7 + 5 - \left(\frac{3}{2} \times \frac{1}{4}\right) \text{ of } \frac{2}{7} + \frac{7}{2} \times \frac{3}{14}$$

- Ans  1.  $\frac{175}{4}$   
 2.  $\frac{177}{14}$   
 3.  $\frac{177}{28}$   
 4.  $\frac{173}{4}$

Question ID : 9895807655  
Chosen Option : 2

Q.6 The average weight of A, B and C is 45 kg. If the average weight of A and C is 42 kg and that of B and C is 38 kg, then the weight of C is:

- Ans  1. 35 kg  
 2. 30 kg  
 3. 25 kg  
 4. 40 kg

Question ID : 9895807656  
Chosen Option : 3

Q.6 If the ratio of present age of Jeet and Jay is 6 : 7 and after 5 years the ratio will be 7 : 8, what is the present age of Jay?

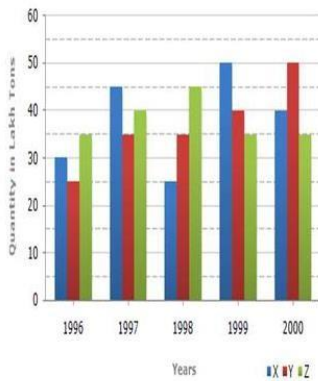
- Ans  1. 56  
 2. 48  
 3. 35  
 4. 64

Q.6 A gun is fired at a distance of 4.2 km away from a tree. If the sound is heard after 13 s, then the speed of the sound is:  
8

- Ans
- 1. 321.1 m/s
  - 2. 320 m/s
  - 3. 322.07 m/s
  - 4. 323.07 m/s

Q.6 Study the bar graph given below that shows the data of the production of paper (in lakh tonnes) by three different companies X, Y and Z over the years and answer the question.  
9

Production of Paper (in lakh tonnes) by Three Companies X, Y and Z over the Years.

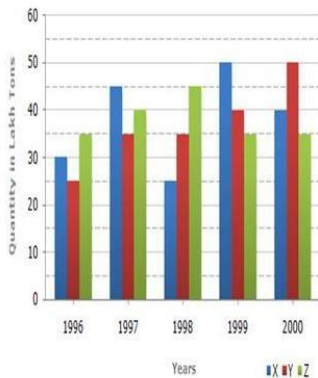


What is the percentage increase in the production of Company X from 1996 to 1997?

- Ans
- 1. 60%
  - 2. 70%
  - 3. 50%
  - 4. 80%

Q.7 Study the bar graph given below that shows the data of the production of paper (in lakh tonnes) by three different companies X, Y and Z over the years and answer the questions.  
0

Production of Paper (in lakh tonnes) by Three Companies X, Y and Z over the Years.



Question:

What is the ratio of the average production of Company Y in the period 1997-1999 to the average production of Company Z in the same period?

- Ans
- 1.

2. 11 : 12  
 3. 12 : 11  
 4. 12 : 15

Question ID : 9895807675  
Chosen Option : 2

Q.7 Ahmed buys an old scooter for ₹5,200 and spends ₹800 on its repairs. If he sells the scooter for ₹6,600, his gain percent  
1 is:

- Ans  1. 10%  
 2. 8%  
 3. 12%  
 4. 9%

Question ID : 9895807661  
Chosen Option : 4

Q.7 A and B can do a work in 10 days and 15 days respectively. If they work at it on alternate days, A starting first. In how  
2 many days the work will be completed?

- Ans  1. 6 days  
 2. 12 days  
 3. 15 days  
 4. 10 days

Question ID : 9895807669  
Chosen Option : 2

Q.7 Simplify:  $87 - 6 \text{ of } (28 - 13) + 4 \times 9$   
3

- Ans  1. 30  
 2. 33  
 3. 43  
 4. 23

Question ID : 9895807654  
Chosen Option : 2

Q.7 The mean of 100 items was found to be 30. If at the time of calculation, two items were wrongly taken as 32 and 12  
4 instead of 23 and 11, then the correct mean is:

- Ans  1. 30.5  
 2. 29.9  
 3. 32  
 4. 29

Question ID : 9895807659  
Chosen Option : 2

Q.7 There is a 10% discount on a dozen pairs of trousers marked at ₹6000. How many pair of trousers can be bought with  
5 ₹2700?

- Ans  1. 4  
 2.  
 3. 7  
 4. 3



Section : English Language

Q.1 Select the option that means the same as the given idiom.

A leopard can't change its spots.

- Ans
1. It is possible to change someone's character
  2. A leopard's without spots cannot be found easily in a jungle
  3. A leopard can be found easily because of its spots in a jungle
  4. It is impossible for one to change one's character

Q.2 From the given options, identify the segment in the sentence which contains the grammatical error.

The pancreas plays an important role in digestion and regulating blood sugar in living bodies.

- Ans
1. in living bodies
  2. in digestion and regulating
  3. an important role
  4. The pancreas plays

Q.3 Select the word which means the same as the group of words given.

The arrangement of events or dates in the order of their occurrence.

- Ans
1. Customisation
  2. Classification
  3. Cataloguing
  4. Chronology

Q.4 Select the most appropriate option to substitute the underlined segment in the given sentence. If there is no need to substitute it, select No improvement.

It is the adversity that makes you stronger, kinder and most generous than before in life.

- Ans
1. the most generous than before in life.
  2. more generous than before in life.
  3. No improvement
  4. most generous than before for life.

Q.5 From the given options, identify the segment in the sentence which contains the grammatical error.

Unable to pay the debts, the whole family is forced to spent several days in a jail.

Ans

1. Unable to pay the debts
2. days in a jail
3. is forced to spent
4. the whole family

Question ID : 9895807983  
Chosen Option : --

Comprehension:

In the following passage some words have been deleted. Fill in the blanks with the help of the alternatives given.

Integration in the group means mutual ties (1) \_\_\_\_\_ its members. The quality of ties may differ from group to group. Integration has two (2) \_\_\_\_\_ - one is the process of integration and the other is the unified conditions. As a process, integration always goes (3) \_\_\_\_\_ in the society. Social system keeps changing and the units keep (4) \_\_\_\_\_ themselves accordingly. Sometimes change in a single unit also changes the whole system. Integration is the balance between the whole and its units. When this balance is (5) \_\_\_\_\_, disintegration begins in the system.

SubQuestion No : 6

Q.6 Select the most appropriate option that will fill in the blank number 1.

Ans

1. among
2. together
3. both
4. between

Question ID : 9895807992  
Chosen Option : --

Comprehension:

In the following passage some words have been deleted. Fill in the blanks with the help of the alternatives given.

Integration in the group means mutual ties (1) \_\_\_\_\_ its members. The quality of ties may differ from group to group. Integration has two (2) \_\_\_\_\_ - one is the process of integration and the other is the unified conditions. As a process, integration always goes (3) \_\_\_\_\_ in the society. Social system keeps changing and the units keep (4) \_\_\_\_\_ themselves accordingly. Sometimes change in a single unit also changes the whole system. Integration is the balance between the whole and its units. When this balance is (5) \_\_\_\_\_, disintegration begins in the system.

SubQuestion No : 7

Q.7 Select the most appropriate option that will fill in the blank number 2.

Ans

- 1.

- 2. measures
- 3. aspects
- 4. methods

Question ID : 9895807993  
Chosen Option : --

**Comprehension:**

In the following passage some words have been deleted. Fill in the blanks with the help of the alternatives given.

Integration in the group means mutual ties (1) \_\_\_\_\_ its members. The quality of ties may differ from group to group. Integration has two (2) \_\_\_\_\_ - one is the process of integration and the other is the unified conditions. As a process, integration always goes (3) \_\_\_\_\_ in the society. Social system keeps changing and the units keep (4) \_\_\_\_\_ themselves accordingly. Sometimes change in a single unit also changes the whole system. Integration is the balance between the whole and its units. When this balance is (5) \_\_\_\_\_, disintegration begins in the system.

SubQuestion No : 8

Q.8 Select the most appropriate option that will fill in the blank number 3.

- Ans
- 1. on
  - 2. under
  - 3. in
  - 4. off

Question ID : 9895807994  
Chosen Option : --

**Comprehension:**

In the following passage some words have been deleted. Fill in the blanks with the help of the alternatives given.

Integration in the group means mutual ties (1) \_\_\_\_\_ its members. The quality of ties may differ from group to group. Integration has two (2) \_\_\_\_\_ - one is the process of integration and the other is the unified conditions. As a process, integration always goes (3) \_\_\_\_\_ in the society. Social system keeps changing and the units keep (4) \_\_\_\_\_ themselves accordingly. Sometimes change in a single unit also changes the whole system. Integration is the balance between the whole and its units. When this balance is (5) \_\_\_\_\_, disintegration begins in the system.

SubQuestion No : 9

Q.9 Select the most appropriate option that will fill in the blank number 4.

- Ans
- 1. admiring
  - 2. admitting
  - 3. adjusting
  - 4. administering

**Comprehension:**

In the following passage some words have been deleted. Fill in the blanks with the help of the alternatives given.

Integration in the group means mutual ties (1) \_\_\_\_\_ its members. The quality of ties may differ from group to group. Integration has two (2) \_\_\_\_\_ - one is the process of integration and the other is the unified conditions. As a process, integration always goes (3) \_\_\_\_\_ in the society. Social system keeps changing and the units keep (4) \_\_\_\_\_ themselves accordingly. Sometimes change in a single unit also changes the whole system. Integration is the balance between the whole and its units. When this balance is (5) \_\_\_\_\_, disintegration begins in the system.

SubQuestion No : 10

Q.1  
0 Select the most appropriate option that will fill in the blank number 5.

- Ans
1. disrupt
  2. disrupted
  3. disrupts
  4. disrupting

Q.1  
1 Select the most appropriate word to fill in the blank.

Japanese monkeys have been spotted \_\_\_\_\_ baths in man - made hot springs during winter.

- Ans
1. assembling
  2. soothing
  3. taking
  4. making

Q.1  
2 Select the synonym of the given word.

ABRUPTLY

- Ans
1. Suddenly
  2. Slowly
  3. Easily
  4. Leisurely

Q.1  
3 Select the correctly spelt word.

- Ans  1. Magnficent  
 2. Magnificaent  
 3. Magnificent  
 4. Magneficent

Question ID : 9895808005  
Chosen Option : --

Q.1 From the given options, identify the segment in the sentence which contains the grammatical error.  
4

Technology plays a vital role at the modern life and influences the course of human civilisation unceasingly.

- Ans  1. influences the course of  
 2. Technology plays a vital role  
 3. human civilisation unceasingly  
 4. at the modern life and

Question ID : 9895807984  
Chosen Option : --

Q.1 Select the most appropriate option to fill in the blank.  
5

Most often I wish I \_\_\_\_\_ his luck.

- Ans  1. has  
 2. have  
 3. would had  
 4. had

Question ID : 9895807990  
Chosen Option : --

Q.1 Select the most appropriate word to fill in the blank.

6  
Ecology is the study of the \_\_\_\_\_ between plants, animals, people and their environment, and the balances between these relationships.

- Ans  1. contacts  
 2. connections  
 3. influences  
 4. effects

Question ID : 9895808007  
Chosen Option : --

Q.1 Select the most appropriate option to fill in the blank.  
7

It is wonderful that anxiety is a good example of a condition that works \_\_\_\_\_ or against us.

- Ans  1. about  
 2. for  
 3. of  
 4. around

Question ID : 9895807989  
Chosen Option : --

Q.1  
8 Select the antonym of the given word.

CAJOLE

- Ans
1. Repulse
  2. Rejoice
  3. Request
  4. Response

Question ID : 9895808000  
Chosen Option : --

Q.1  
9 Select the option that means the same as the given idiom.

To cry over spilled milk

- Ans
1. To cry for milk products
  2. To cry for that which cannot be made possible
  3. To regret about that which cannot be rectified
  4. To cry for trivial matters

Question ID : 9895808001  
Chosen Option : --

Q.2  
0 Select the most appropriate option to substitute the underlined segment in the given sentence. If there is no need to substitute it, select No improvement.

The players were informed that, in the game, anyone who cross the line would be disqualified.

- Ans
1. anyone who will crosses the line
  2. No improvement
  3. anyone who crosses the line
  4. anyone that cross the line

Question ID : 9895807987  
Chosen Option : --

Q.2  
1 Select the antonym of the given word.

ADAMANT

- Ans
1. Agreeable
  2. Innocent
  3. Gullible
  4. Firm

Question ID : 9895807999  
Chosen Option : --

Q.2  
2 Select the word which means the same as the group of words given.

A solution or remedy for all difficulties or diseases.

- Ans
- 1.

- ✓ 2. Medicine
- ✗ 3. Treatment
- ✗ 4. Panacea

Question ID : 9895808003  
Chosen Option : --

Q.2 Select the correctly spelt word.

- Ans
- 1. Synchronize
  - 2. Synchroneze
  - 3. Synchornize
  - 4. Snychronize

Question ID : 9895808006  
Chosen Option : --

Q.2 Select the most appropriate option to substitute the underlined segment in the given sentence. If there is no need to substitute it, select No improvement.

Access to mobile phones and an Internet enables job - seekers to search for jobs anywhere in India and abroad.

- Ans
- 1. internet enables job - seekers
  - 2. No improvement
  - 3. internet enable job - seekers
  - 4. the Internet enables job - seekers

Question ID : 9895807986  
Chosen Option : --

Q.2 Select the synonym of the given word.

PLEA

- Ans
- ✗ 1. Duty
  - ✗ 2. Claim
  - 3. Right
  - 4. Appeal

Question ID : 9895807998  
Chosen Option : --

Section : Hindi Language

Q.1 निम्नलिखित में से उस विकल्प का चयन करें जो 'साँप सूँघ जाना' मुहाबरे का अर्थ व्यक्त करता है।

- Ans
- ✗ 1. प्रसन्न हो जाना
  - ✗ 2. साँप को सूँघ कर जाना
  - ✓ 3. निश्चेष्ट हो जाना
  - ✗ 4. दुखी हो जाना

Question ID : 9895806781

Q.2 रिक्त स्थान को भरने के लिए उपयुक्त शब्द का चयन करें।

\_\_\_\_\_ मित्र जीवन के लिए एक वरदान होता है।

Ans

1. बुरा
- ✗ 2. बदमाश
- ✓ 3. सच्चा
- ✗ 4. कच्चा

Question ID : 9895806770

Chosen Option : 3

Q.3 दिए गए वाक्य का वह भाग ज्ञात करें जिसमें कोई त्रुटि है।

देश के सामने शिक्षा और स्वास्थ्य संबंधी अनेकों समस्याएँ हैं।

Ans

1. शिक्षा और स्वास्थ्य संबंधी
2. देश के सामने
3. समस्याएँ हैं।
4. अनेकों

Question ID : 9895806761

Chosen Option : 2

Q.4 दिये गये वाक्यांश के लिए एक शब्द दीजिये।

जो करने योग्य हो

Ans

1. कर्मठ
2. अकरणीय
3. करणीय
4. अकर्मठ

Question ID : 9895806783

Chosen Option : 3

Q.5 दिए गए शब्द का विलोम चुनें।

संक्षेप

Ans

1. विक्षेप
- ✗ 2. कम
3. लघु
4. विस्तार

Question ID : 9895806777



Q.6 सही वर्तनी वाले शब्द का चयन करें।

- Ans
- 1. महातमा
  - 2. महात्मा
  - 3. माहत्मा
  - 4. महत्मा

Question ID : 9895806785

Chosen Option : 2

Q.7 रिक्त स्थान को भरने के लिए उपयुक्त शब्द का चयन करें।

ईमानदारी से मेहनत करो, चाहे लाभ हो \_\_\_\_\_ हानि।

- Ans
- 1. बल्कि
  - 2. या
  - 3. इसलिए
  - 4. ताकि

Question ID : 9895806768

Chosen Option : 2

Q.8 दिए गए वाक्य में रेखांकित खंड को प्रतिस्थापित करने के लिए उपयुक्त विकल्प का चयन करें।

हमारे देहात बहुत उपेक्षित रहे हैं, उन्हें विकसित करने की आवश्यकता है।

- Ans
- 1. शहर
  - 2. नगर
  - 3. महानगर
  - 4. गाँव

Question ID : 9895806765

Chosen Option : 4

Q.9 दिए गए वाक्य का वह भाग ज्ञात करें जिसमें कोई त्रुटि है।

मनुष्य का जीवन इतनी विशाल है कि उसके आचरण से कोई न कोई प्रभावित हो ही जाता है।

- Ans
- 1. मनुष्य का जीवन
  - 2. उसके आचरण से
  - 3. इतनी विशाल है कि
  - 4. कोई न कोई प्रभावित हो ही जाता है।

Question ID : 9895806762

Chosen Option : 2

Comprehension:

निम्नलिखित गद्यांश के रिक्त स्थानों की पूर्ति गद्यांश के नीचे दिए गए प्रश्नों के अनुसार कीजिए-

डॉ.कलाम \_\_\_\_\_ (1) इच्छाशक्ति वाले वैज्ञानिक थे। वे भारत को विकसित देश बनाने का \_\_\_\_\_ (2) सजोये हुए थे। उनका मानना था कि भारतवासियों को \_\_\_\_\_ (3) दृष्टि से सोचना चाहिए। हमें सपने देखने चाहिए। सपनों को विचारों में \_\_\_\_\_ (4) चाहिए। विचारों को कार्यवाही के माध्यम से \_\_\_\_\_ (5) में बदलना चाहिए।

SubQuestion No : 10

Q.1  
0 गद्यांश में संकेतित रिक्त स्थान (1) के लिए उपयुक्त शब्द होगा।

- Ans
- 1. दृढ़
  - 2. कम
  - 3. कठोर
  - 4. नम्र

Question ID : 9895806772

Chosen Option : 3

Comprehension:

निम्नलिखित गद्यांश के रिक्त स्थानों की पूर्ति गद्यांश के नीचे दिए गए प्रश्नों के अनुसार कीजिए-

डॉ.कलाम \_\_\_\_\_ (1) इच्छाशक्ति वाले वैज्ञानिक थे। वे भारत को विकसित देश बनाने का \_\_\_\_\_ (2) सजोये हुए थे। उनका मानना था कि भारतवासियों को \_\_\_\_\_ (3) दृष्टि से सोचना चाहिए। हमें सपने देखने चाहिए। सपनों को विचारों में \_\_\_\_\_ (4) चाहिए। विचारों को कार्यवाही के माध्यम से \_\_\_\_\_ (5) में बदलना चाहिए।

SubQuestion No : 11

Q.1  
1 गद्यांश में संकेतित रिक्त स्थान (2) के लिए उपयुक्त शब्द होगा।

- Ans
- 1. अपना
  - 2. सपना
  - 3. आशंका
  - 4. हकीकत

Question ID : 9895806773

Chosen Option : 2

Comprehension:

निम्नलिखित गद्यांश के रिक्त स्थानों की पूर्ति गद्यांश के नीचे दिए गए प्रश्नों के अनुसार कीजिए-

डॉ.कलाम \_\_\_\_\_ (1) इच्छाशक्ति वाले वैज्ञानिक थे। वे भारत को विकसित देश बनाने का \_\_\_\_\_ (2) सजोये हुए थे। उनका मानना था कि भारतवासियों को \_\_\_\_\_ (3) दृष्टि से सोचना चाहिए। हमें सपने देखने चाहिए। सपनों को विचारों में \_\_\_\_\_ (4) चाहिए। विचारों को कार्यवाही के माध्यम से \_\_\_\_\_ (5) में बदलना चाहिए।

SubQuestion No : 12

Q.1  
2 गद्यांश में संकेतित रिक्त स्थान (3) के लिए उपयुक्त शब्द होगा।

- Ans  1. व्यापक  
 2. संकुचित  
 3. संकीर्ण  
 4. क्षीण

Question ID : 9895806774  
Chosen Option : 2

Comprehension:

निम्नलिखित गद्यांश के रिक्त स्थानों की पूर्ति गद्यांश के नीचे दिए गए प्रश्नों के अनुसार कीजिए-

डॉ.कलाम \_\_\_\_\_ (1) इच्छाशक्ति वाले वैज्ञानिक थे। वे भारत को विकसित देश बनाने का \_\_\_\_\_ (2) सजोये हुए थे। उनका मानना था कि भारतवासियों को \_\_\_\_\_ (3) दृष्टि से सोचना चाहिए। हमें सपने देखने चाहिए। सपनों को विचारों में \_\_\_\_\_ (4) चाहिए। विचारों को कार्यवाही के माध्यम से \_\_\_\_\_ (5) में बदलना चाहिए।

SubQuestion No : 13

Q.1  
3 गद्यांश में संकेतित रिक्त स्थान (4) के लिए उपयुक्त शब्द होगा।

- Ans  1. देना  
 2. बदलना  
 3. करना  
 4. उठाना

Question ID : 9895806775  
Chosen Option : 2

Comprehension:

निम्नलिखित गद्यांश के रिक्त स्थानों की पूर्ति गद्यांश के नीचे दिए गए प्रश्नों के अनुसार कीजिए-

डॉ.कलाम \_\_\_\_\_ (1) इच्छाशक्ति वाले वैज्ञानिक थे। वे भारत को विकसित देश बनाने का \_\_\_\_\_ (2) सजोये हुए थे। उनका मानना था कि भारतवासियों को \_\_\_\_\_ (3) दृष्टि से सोचना चाहिए। हमें सपने देखने चाहिए। सपनों को विचारों में \_\_\_\_\_ (4) चाहिए। विचारों को कार्यवाही के माध्यम से \_\_\_\_\_ (5) में बदलना चाहिए।

SubQuestion No : 14

Q.1  
4 गद्यांश में संकेतित रिक्त स्थान (5) के लिए उपयुक्त शब्द होगा।

- Ans
- 1. कल्पना
  - 2. सपना
  - 3. हकीकत
  - 4. आशा

Question ID : 9895806776  
Chosen Option : 3

Q.1  
5 रिक्त स्थान को भरने के लिए उपयुक्त शब्द का चयन करें।

पुलिस विभाग को चाहिए कि वह \_\_\_\_\_ जनता को परेशान न करें।

- Ans
- 1. दोषी
  - 2. निर्दय
  - 3. अपराधी
  - 4. निर्दोष

Question ID : 9895806769  
Chosen Option : 4

Q.1  
6 निम्नलिखित में से उस विकल्प का चयन करें जो 'सिर पर पाँव रखकर भागना' मुहावरे का अर्थ व्यक्त करता है।

- Ans
- 1. धीरे-धीरे चलना
  - 2. बहुत तेज भागना
  - 3. पाँव सिर के ऊपर रखकर भागना
  - 4. बहुत तेज कूदना

Question ID : 9895806782  
Chosen Option : 4

Q.1  
7 दिए गए शब्द के पर्यायवाची शब्द का चयन करें।

आश्वासन

- Ans
1. अविश्वसनीय
  2. दिलासा
  3. अविश्वास
  4. अंदाजा

Question ID : 9895806780  
Chosen Option : 2

Q.1  
8 दिए गए शब्द के पर्यायवाची शब्द का चयन करें।

धनवान

- Ans
1. संपूर्ण
  2. सम्पन्न
  3. महत्
  4. यथेष्ट

Question ID : 9895806779  
Chosen Option : 2

Q.1  
9 दिए गए शब्द का विलोम चुनें।

हास्य

- Ans
1. रुदन
  2. विनोद
  3. मनोरंजन
  4. मनोरम

Question ID : 9895806778  
Chosen Option : 2

Q.2  
0 दिए गए वाक्य का वह भाग ज्ञात करें जिसमें कोई त्रुटि है।

संस्कृति तब तक अंधी रहती है, जब तक राष्ट्र की अपनी वाणी नहीं होता।

- Ans
1. अपनी वाणी नहीं होता।
  2. जब तक राष्ट्र की
  3. अंधी रहती है,
  4. संस्कृति तब तक

Question ID : 9895806763  
Chosen Option : 2

Q.2  
1 दिए गए वाक्य में रेखांकित खंड को प्रतिस्थापित करने के लिए उपयुक्त विकल्प का चयन करें।

कोयल का कंठ मधुरतम है।

Ans

1. कोकिला
2. खग
3. पक्षी
4. सुग्गा

Question ID : 9895806766  
Chosen Option : 3

Q.2  
2 रिक्त स्थान को भरने के लिए उपयुक्त शब्द का चयन करें।

पेड़ पर \_\_\_\_\_ खिल रहे हैं।

Ans

1. पत्ते
2. फूल
3. टहनी
4. फल

Question ID : 9895806767  
Chosen Option : 2

Q.2  
3 दिये गये वाक्यांश के लिए एक शब्द दीजिये।

दोपहर के बाद का समय

Ans

1. अपराहन
2. पूर्वाहन
3. मध्याहन
4. रात्रि

Question ID : 9895806784  
Chosen Option : 3

Q.2  
4 सही वर्तनी वाले शब्द का चयन करें।

Ans

1. वीणापाणि
2. विणापाणि
3. वीणापानी
4. विणापनि


Question ID : 9895806786  
Chosen Option : 3


Q.2  
5 दिए गए वाक्य में रेखांकित खंड को प्रतिस्थापित करने के लिए उपयुक्त विकल्प का चयन करें।

रावण लंका का राजा था।

Ans

1. सम्राट
2. पंचानन

 3. चतुरानन

 4. दशानन

Question ID : 9895806764  
Chosen Option : 3