

## Constable (GD) in CAPFs, NIA, SSF and Rifleman (GD) in Assam Rifles Examination, 2018





Roll No. :	
Registration No.	
Name :	
Exam Venue :	iON Digital Zone iDZ Kozhikode
Exam Time :	9:00 AM - 10:30 AM
Exam Date :	03/03/2019

Section : General Section

**Q.1** Select the Venn diagram that best illustrates the relationship between the three given classes.

Keyboard, Monitor, Mouse

Ans

- 1. 
- 2. 
- 3. 
- 4. 

Question ID : 9895808313

Chosen Option : 1

**Q.2**

Find the missing number from the below options.



Ans

- 1. 12
- 2. 48
- 3. 24
- 4. 56

Question ID : 9895808306

Chosen Option : 3

**Q.3**


Choose the option that most closely resembles the mirror image of the given figure when mirror is placed at right side.

Questions Figure:



Ans

1.



2.



3.



4.



Question ID : 9895808311  
Chosen Option : 2

Q.4 Select the option that is related to the fourth term in the same way as the first term is related to the second term.

MNQR : LMPQ :: ? : RSVW

Ans

1. STWX

2. WYTS

3. SVWY

4. VTWY

Question ID : 9895808294  
Chosen Option : 1

Q.5 If RED is coded as 19, then how WED would be coded?

Ans

1. 21

2. 28

3. 22

4. 24

Question ID : 9895808296  
Chosen Option : 4

Q.6 A, B, C, D, E, F, G and H are sitting around a round table facing the centre. D is fourth to the right of H and second to the left of B. F is fourth to the right of B. C is fourth to the right of E, who is not an immediate right of B or D. A is not an immediate neighbour of D.

In which of the following combinations is the third person sitting in between the first and the second persons?

Ans

1. CBA

2. ABC

3. GCD

4. AHE

Question ID : 9895808298

Q.7 Select the option that is related to the third term in the same way as the second term is related to the first term.

Television : Telecast :: Radio : ?

- Ans  1. Broadcast  
 2. Friendship  
 3. Compose  
 4. Talking

Question ID : 9895808292  
Chosen Option : 1

Q.8 In a certain code "SMART" is written as "RKXNO", How is "GREAT" written in that code?

- Ans  1. BGFWO  
 2. FPBWO  
 3. RPFGW  
 4. FPBWR

Question ID : 9895808295  
Chosen Option : 2

Q.9 Choose the option which completes the given figure series



Ans

- 1.
- 2.
- 3.
- 4.

Question ID : 9895808308  
Chosen Option : 4

Q.1 Select the option that is related to the Third term in the same way as the first term is related to the second term.

0

42 : 72 :: 12 : ?

- Ans  1. 30  
 2. 43

3. 35

4. 48

Question ID : 9895808304

Chosen Option : 4

Q.1 Select the option that is related to the third term in the same way as the first term is related to the second term.

1

Mango : Fruit : : Potato : ?

Ans  1. Flower

2. Fruit

3. Vegetable

4. Stem

Question ID : 9895808293

Chosen Option : 3

Q.1 Four words have been given out of which three are alike in some manner, while one is different. Choose the odd one.

2

Ans  1. Dumb

2. Sinus

3. Deaf

4. Blind

Question ID : 9895808291

Chosen Option : 1

Q.1 Sonam is older than Renu. komal is younger than Renu. Priya is older than Sonam. Who is the eldest of them?

3

Ans  1. Sonam

2. Renu

3. Priya

4. Komal

Question ID : 9895808299

Chosen Option : 4

Q.1 Four options have been given out of which three are alike in some manner, while one is different. Choose the odd one.

4

Ans  1. 2248

2. 3036

3. 1258

4. 3196

Question ID : 9895808305

Chosen Option : 2

Q.1

5

The statements below are followed by two conclusions labeled I and II. Assuming that the information in the statements is true, even if it appears to be at variance with generally established facts, decide which conclusion(s) logically and definitely follow(s) from the information given in the statements.

**Statements:**

All roses are fruits.  
All fruits are trees.

**Conclusions:**

- I. All trees are roses.
- II. Some fruits are roses.

- Ans  1. Both Conclusions I and II follow  
 2. Either Conclusion I or II follows  
 3. Only Conclusion I follows  
 4. Only Conclusion II follows

Question ID : 9895808301  
Chosen Option : 1

Q.1 Select the correct option that will fill in the blank and complete the series.

6

14, 18, 24, 32, 42, ?

- Ans  1. 54  
 2. 50  
 3. 52  
 4. 48

Question ID : 9895808303  
Chosen Option : 1

Q.1 Four letter clusters have been given out of which three are alike in some manner, while one is different. Choose the odd one.

7

- Ans  1. KMP  
 2. ACF  
 3. TVY  
 4. BCG

Question ID : 9895808290  
Chosen Option : 4

Q.1 The statements below are followed by two conclusions labeled I and II. Assuming that the information in the statements is true, even if it appears to be at variance with generally established facts, decide which conclusion(s) logically and definitely follow(s) from the information given in the statements.

8

**Statements:**

Some grapes are mangoes.  
All mangoes are apples.

**Conclusions:**

- I. Some mangoes are grapes.
- II. All apples are grapes.

- Ans  1. Only Conclusion I follows  
 2. Either Conclusion I or II follows  
 3. Both Conclusions I and II follow  
 4. Only Conclusion II follows

Question ID : 9895808300  
Chosen Option : 1

Q.1 Select the correct option that will fill in the blank and complete the series.

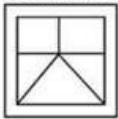
117, 107, 92, 72, \_\_\_\_\_.

- Ans
- 1. 42
  - 2. 47
  - 3. 37
  - 4. 52

Question ID : 9895808302  
Chosen Option : 2

Q.2 Choose the option figure in which the problem figure is hidden/embedded.

Question Figure:



Ans

- 1.
- 2.
- 3.
- 4.

Question ID : 9895808310  
Chosen Option : 4

Q.2 Select the correct option that will fill in the blank and complete the series.

A, G, L, P, S, \_\_\_\_\_.

- Ans
- 1. W
  - 2. U
  - 3. X
  - 4. Y

Question ID : 9895808289  
Chosen Option : 2

Q.2 P, M, D, A, F, H, R and B are sitting around a circle facing at the centre. R is fourth to the right of A, who is third to the right of P. M is second to the left of H, who is second to the left of P. D is third to the right of B.

Which of the following pairs are immediate neighbors of B?

- Ans
- 1. AP
  - 2. MP

- ✓ 3. AF
- ✗ 4. FM

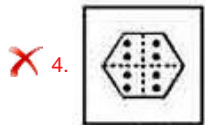
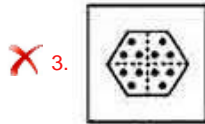
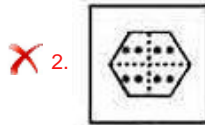
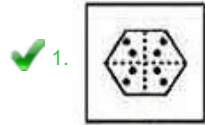
Question ID : 9895808297  
Chosen Option : 2

Q.2 3 A piece of paper is folded and cut as shown below in the question figures, how will it appear when opened?

Questions Figure:



Ans



Question ID : 9895808312  
Chosen Option : 1

Q.2 4 If '+' means '×', '-' means '+', 'x' means '+' and '+' means '-', then find the value of the following equation:-

$$21 \div 8 + 2 - 12 \times 3 = ?$$

- Ans
- ✗ 1. 13.5
  - ✗ 2. 14
  - ✗ 3. 10
  - ✓ 4. 9

Question ID : 9895808307  
Chosen Option : 1

Q.2 5 Which of the following answer figure will complete the given figure?

Question Figure:



Ans





Question ID : 9895808309  
Chosen Option : 3

Q.2 The Supreme Court was established at Fort William in \_\_\_\_\_ as the Apex Court in 1774.  
6

- Ans  1. Delhi  
 2. Shimla  
 3. Mumbai  
 4. Kolkata

Question ID : 9895807366  
Chosen Option : 1

Q.2 Who won the 2018 US Open Men's Tennis?  
7

- Ans  1. Andy Murray  
 2. Rafael Nadal  
 3. Novak Djokovic  
 4. Roger Federer

Question ID : 9895807357  
Chosen Option : 2

Q.2 The Union Budget 2018 allocated \_\_\_\_\_ for food processing, which was almost double of the allocation in the  
8 previous year's budget.

- Ans  1. ₹2,900 crore  
 2. ₹1,400 crore  
 3. ₹1,900 crore  
 4. ₹2,400 crore

Question ID : 9895807362  
Chosen Option : 4

Q.2 In the 2018 Sultan Azlan Shah Cup, India beat which country 4-1 to come at the fifth place?  
9

- Ans  1. Australia  
 2. Malaysia  
 3. Ireland  
 4. Pakistan

Question ID : 9895807356  
Chosen Option : 1



Q.3  
0 Who did Mughal Emperor Babur defeat in the Battle of Ghagra in 1529?

- Ans
- 1. Yusuf Adil Shah
  - 2. Mahmud Lodi
  - 3. Dilawar Khan Husain
  - 4. Qasim Barid I

Question ID : 9895807377  
Chosen Option : 2

Q.3  
1 The mandible is part of the \_\_\_\_\_.

- Ans
- 1. hand
  - 2. arm
  - 3. skull
  - 4. pelvic girdle

Question ID : 9895807371  
Chosen Option : 3

Q.3  
2 \_\_\_\_\_ is an important copper ore mineral.

- Ans
- 1. Galena
  - 2. Cassiterite
  - 3. Cinnabar
  - 4. Chalcocite

Question ID : 9895807370  
Chosen Option : 3

Q.3  
3 The GDP growth rate for the fiscal year 2017-2018 was pegged at \_\_\_\_\_ by the Economic Survey report 2017-18.

- Ans
- 1. 8.25%
  - 2. 7.25%
  - 3. 5.75%
  - 4. 6.75%

Question ID : 9895807361  
Chosen Option : 2

Q.3  
4 Which of the following is the southernmost of the Lakshadweep islands?

- Ans
- 1. Bitra
  - 2. Kavaratti
  - 3. Amini
  - 4. Minicoy

Question ID : 9895807373  
Chosen Option : 2

Q.3  
5 Name the type of folk songs of Sikkim which describe the natural beauty of the state.

- Ans
- 1.

- 2. Mando
- 3. Khubakeshei
- 4. Deknni

Question ID : 9895807353  
Chosen Option : 3

Q.3  
6 Studies on political and social inequalities in democracy show that:

- Ans
- 1. Dictatorship is better than democracy
  - 2. Inequalities do not exist in dictatorships
  - 3. Inequalities exist in democracies
  - 4. Democracy deters development

Question ID : 9895807364  
Chosen Option : 1

Q.3  
7 Name the first Indian to become a member of the British Parliament.

- Ans
- 1. Pилоo Mody
  - 2. Dadabhai Naoroji
  - 3. Bhikaiji Cama
  - 4. Jamshetji Tata

Question ID : 9895807376  
Chosen Option : 3

Q.3  
8 Which of the following dances is a dance form from Madhya Pradesh?

- Ans
- 1. Lezim
  - 2. Chiraw
  - 3. Ottam Thullal
  - 4. Macha

Question ID : 9895807355  
Chosen Option : 2

Q.3  
9 Who founded the Maurya dynasty after defeating Dhana Nanda?

- Ans
- 1. Bindusara
  - 2. Ashoka
  - 3. Kunala
  - 4. Chandragupta

Question ID : 9895807375  
Chosen Option : 4

Q.4  
0 Weber is the unit of \_\_\_\_\_.

- Ans
- 1. electric conductance
  - 2. magnetic flux

3. magnetic flux density
4. capacitance

Question ID : 9895807368  
Chosen Option : 3

Q.4  
1 The formula of Acetonitrile is \_\_\_\_\_.

- Ans
1.  $\text{CH}_3\text{OCN}$
  2.  $\text{C}_2\text{N}_2$
  3.  $\text{CH}_3\text{CN}$
  4.  $\text{CH}_2\text{CHCN}$

Question ID : 9895807369  
Chosen Option : 3

Q.4  
2 Which of the following is a correct equation of motion?

- Ans
1.  $u = v + at^2$
  2.  $2s = (v - u)t$
  3.  $2s = 2ut + at^2$
  4.  $v^2 + u^2 = 2as$

Question ID : 9895807367  
Chosen Option : 3

Q.4  
3 Which of the following Indian National political parties is reputed to be one of the oldest, founded in 1885 and has experienced many splits?

- Ans
1. Communist Party of India – Marxist (CPI-M)
  2. Nationalist Congress Party (NCP)
  3. Indian National Congress (INC)
  4. Bahujan Samaj Party (BSP)

Question ID : 9895807365  
Chosen Option : 3

Q.4  
4 Losar Festival is celebrated by the people of the \_\_\_\_\_ tribe.

- Ans
1. Khasi
  2. Kodava
  3. Munda
  4. Monpa

Question ID : 9895807354  
Chosen Option : 3

Q.4  
5 Ganymede is by far the largest moon in our solar system orbits around the planet \_\_\_\_\_.

- Ans
1. Uranus
  2. Neptune

3. Jupiter

4. Saturn

Question ID : 9895807374

Chosen Option : 3

Q.4  
6 Which Bharat Ratna recipient's birthday is celebrated as Engineer's Day?

Ans  1. Abdul Kalam Azad

2. J R D Tata

3. M Visvesvaraya

4. C V Raman

Question ID : 9895807358

Chosen Option : 3

Q.4  
7 Which of the following rivers flows into the Arabian Sea?

Ans  1. Mahi

2. Krishna

3. Penna

4. Rushikulya

Question ID : 9895807372

Chosen Option : 3

Q.4  
8 Which book by Kiran Desai is a tale of a young man named Sampath Chawla?

Ans  1. Hullabaloo in the Guava Orchard

2. Selection Day

3. An Equal Music

4. It Happens for a Reason

Question ID : 9895807359

Chosen Option : 4

Q.4  
9 Minimum Support Price for 2018-19 for Paddy of the Common variety is set at \_\_\_\_\_.

Ans 1. ₹2,430 per quintal

2. ₹1,750 per quintal

3. ₹5,150 per quintal

4. ₹1,950 per quintal

Question ID : 9895807363

Chosen Option : 1

Q.5  
0 Which is the first ever known autobiography of an Indian woman?

Ans 1. My reminences

2. Beyond the jungle

3. Amar Jiban

4. City of 2 gateways

Question ID : 9895807360  
Chosen Option : 3

Q.5<sub>1</sub> Simplify :  $5 - 6.5 \div 13 + 2.3 \times 0.8 + 0.4$

- Ans
- 1. 6.83
  - 2. 6.74
  - 3. 7.38
  - 4. 5.38

Question ID : 9895807679  
Chosen Option : 3

Q.5<sub>2</sub> A car travels 60km in the first hour , 65km in the second hour , 70km in the third hour, then the average speed of the car is

- Ans
- 1. 66 km/hr
  - 2. 62 km/hr
  - 3. 56 km/hr
  - 4. 65 km/hr

Question ID : 9895807696  
Chosen Option : 3

Q.5<sub>3</sub> Amit borrowed ₹8000 from a money lender with Simple interest for as many years as the rate of interest. If he paid ₹2000 as interest at the end of loan period, what was the rate of interest?

- Ans
- 1. 5%
  - 2. 7%
  - 3. 6%
  - 4. 8%

Question ID : 9895807691  
Chosen Option : 2

Q.5<sub>4</sub> Average of 'n' observations is 38, average of 'n' other observations is 42 and average of remaining 'n' observations is 55. Average of all the observations is:

- Ans
- 1. 45
  - 2. 35
  - 3. 55
  - 4. 40

Question ID : 9895807682  
Chosen Option : 3

Q.5<sub>5</sub> I sold an article for ₹8800 thus gained 10%. For what amount should I sell it to get 15% profit?

- Ans
- 1. ₹9,400
  - 2. ₹9,300
  - 3. ₹9,200
  - 4. ₹9,500

Question ID : 9895807687

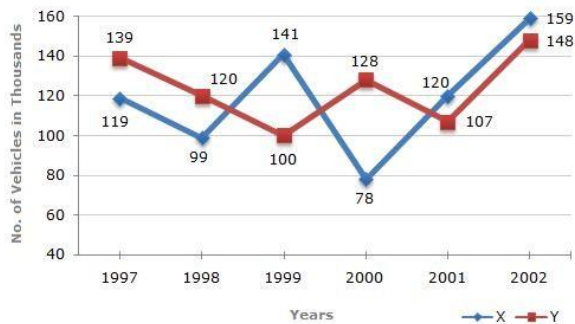
Q.5  
6 Simplify :  $8 + 3 - \left(\frac{5}{2} \times \frac{1}{3}\right)$  of  $\frac{12}{5} + \frac{4}{3} \times \frac{3}{8}$

- Ans  1. 9.5  
 2. 10  
 3. 9  
 4. 19

Question ID : 9895807680  
Chosen Option : 3

Q.5  
7 Study the following line graph and answer the question based on it.

**Number of Vehicles Manufactured by Two companies over the Years (Number in Thousands)**



What is the difference between the total productions of the two companies from 1997 to 2000?

- Ans  1. 40000  
 2. 50000  
 3. 30000  
 4. 60000

Question ID : 9895807700  
Chosen Option : 3

Q.5  
8 A, B and C can do a piece of work in 12, 15 and 30 days respectively. If they do a work together, find the ratio in which the amount is to be distributed

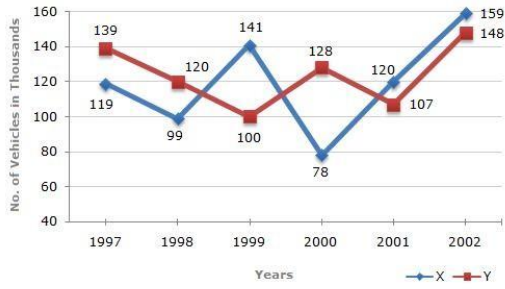
- Ans  1. 4 : 5 : 2  
 2. 2 : 5 : 4  
 3. 2 : 4 : 5  
 4. 5 : 4 : 2

Question ID : 9895807694  
Chosen Option : 2

Q.5  
9

Study the following line graph and answer the question based on it.

Number of Vehicles Manufactured by Two companies over the Years (Number in Thousands)



In which of the following years, the difference between the productions of Companies X and Y was the minimum among the given years?

- Ans
- 1. 1997
  - 2. 2000
  - 3. 2002
  - 4. 1999

Question ID : 9895807702  
Chosen Option : 3

Q.6 Ramu got a new table for 25% discount. Had he got no discount, Ramu would have had to pay ₹185 more. How much did Ramu pay for the table?

- Ans
- 1. ₹535
  - 2. ₹545
  - 3. ₹555
  - 4. ₹565

Question ID : 9895807683  
Chosen Option : 3

Q.6 In an examination, a student has to secure 35% of the maximum marks to pass. One student got 70 marks and failed by 10 marks. The maximum marks in the examination are

- Ans
- 1. 400
  - 2. 300
  - 3. 500
  - 4. 200

Question ID : 9895807685  
Chosen Option : 1

Q.6 The length and breadth of a rectangle are in the ratio 8:3. Find Its area if perimeter is 132 cm.

- Ans
- 1.  $864 \text{ cm}^2$
  - 2.  $684 \text{ cm}^2$
  - 3.  $648 \text{ cm}^2$
  - 4.  $846 \text{ cm}^2$

Question ID : 9895807698  
Chosen Option : 4

**Q.6** Two cylindrical cans has the base of the same size. The diameter of each is 14cm. The height of one can is 10cm and another 20cm. Find the ratio of their volumes.

- Ans**
- 1. 3 : 2
  - 2. 2 : 3
  - 3. 1 : 2
  - 4. 2 : 1

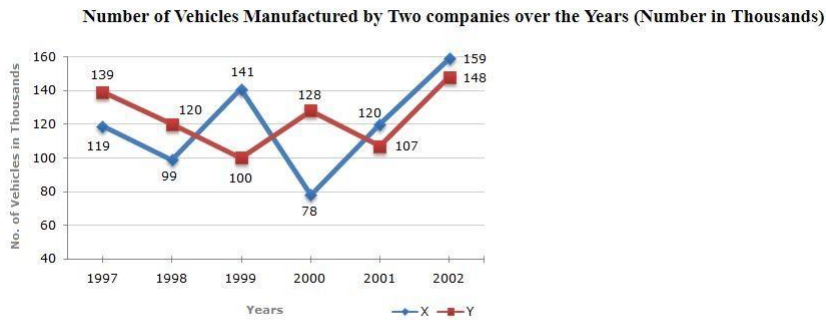
Question ID : 9895807699  
Chosen Option : 1

**Q.6** The ratio between two natural number is 3:4 , find the smallest number which must be added so that the ratio becomes 4:5 and the sum of the numbers will be 27.

- Ans**
- 1. 5
  - 2. 6
  - 3. 4
  - 4. 3

Question ID : 9895807689  
Chosen Option : 2

**Q.6** Study the following line graph and answer the question based on it.



The production of Company Y in 1998 was approximately what percent of the production of Company X in the same year

- Ans**
- 1. 212.1%
  - 2. 211.2%
  - 3. 112.2%
  - 4. 121.2%

Question ID : 9895807701  
Chosen Option : 4

**Q.6** A alone can do a piece of work in 12 days and B alone in 16 days. They undertook to do the work for ₹350. How much will B get ?

- Ans**
- 1. ₹150
  - 2. ₹200
  - 3. ₹250
  - 4. ₹180

Question ID : 9895807693  
Chosen Option : 2

**Q.6** The mean of a set of eight numbers is 63. If one of the numbers is discarded, the mean of the remaining numbers is 58. The value of discarded number is

- Ans**
- 1. 88
  - 2. 89



3. 78

4. 98

Question ID : 9895807684  
Chosen Option : 3

Q.6  
8 Average of first eight multiples of 8 is

Ans  1. 36

2. 46

3. 32

4. 72

Question ID : 9895807681  
Chosen Option : 1

Q.6  
9 A shop keeper reduces the selling price of an article by 39, a gain of 10% turns in to a loss of 3%, then the original price of the article is?

Ans  1. ₹350

2. ₹300

3. ₹250

4. ₹200

Question ID : 9895807686  
Chosen Option : 1

Q.7  
0 The differences between the circumference and diameter of a circle is 60 cm, then radius is

Ans  1. 12 cm

2. 13 cm

3. 14 cm

4. 15 cm

Question ID : 9895807697  
Chosen Option : 1

Q.7  
1 The population of Varanasi is 2,25,000. If the annual birth rate and death rate are 9 % and 7 %, calculate the population of city after 2 years.

Ans  1. 432090

2. 423900

3. 243090

4. 234090

Question ID : 9895807692  
Chosen Option : 3

Q.7  
2 The ratio between 2 numbers is 4:5 and the sum of their squares is 1025 , then the numbers are

Ans  1. 20 and 25

2. 24 and 30

3. 8 and 10

4. 40 and 50

Question ID : 9895807688

**Q.7** A car travels a certain distance at a speed of 120km/hr in 4 hours. What should be the speed of the car if the car covers  
3 the same distance in 3 hours 20 minutes.

- Ans
- 1. 142 km/hr
  - 2. 140 km/hr
  - 3. 124 km/hr
  - 4. 144 km/hr

Question ID : 9895807695  
Chosen Option : 3

**Q.7** Three persons A, B and C can complete one round of a circular track in 8, 15 and 20 minutes respectively. If they start  
4 together at 8 A.M from a certain point, at which time will they be together again at the starting point?

- Ans
- 1. 10 AM
  - 2. 12 Noon
  - 3. 11 AM
  - 4. 9 AM

Question ID : 9895807678  
Chosen Option : 4

**Q.7** The ratio of the ages of Arun and Anand is 3:1. After 5 years Arun age will be 5 more than two times of Anand's age.  
5 Then the present age of Arun is

- Ans
- 1. 40
  - 2. 30
  - 3. 35
  - 4. 25

Question ID : 9895807690  
Chosen Option : 3

Section : English Language

**Q.1** Select the most appropriate option to substitute the underlined segment in the given sentence. If there is no need to substitute it, select No improvement.

He welcomed the audience with a heartfelt gratitude for their kind presence on the day of the social gathering in the college.

- Ans
- 1. No Improvement
  - 2. for their kind presences
  - 3. of their kind presence
  - 4. for their kind present

Question ID : 9895808014  
Chosen Option : 3

**Q.2** Select the most appropriate option to substitute the underlined segment in the given sentence. If there is no need to substitute it, select No improvement.

My cousin won't be able to leave for Mumbai until his parents will have arrived.

- Ans
- 1. until his parents will arrive
  - 2. until his parents arrive
  - 3. until his parents won't arrive

4. No Improvement

Question ID : 9895808012  
Chosen Option : 2

Q.3 Select the most appropriate option to fill in the blank.

There is no prediction that \_\_\_\_\_ how fast dehydration can affect your general health.

- Ans
1. have been showing
  2. have show
  3. shows
  4. showed

Question ID : 9895808016  
Chosen Option : 1

Q.4 Select the synonym of the given word.

FLIMSY

- Ans
1. general
  2. coarse
  3. sturdy
  4. Feeble

Question ID : 9895808023  
Chosen Option : 3

Q.5 From the given options, identify the segment in the sentence which contains the grammatical error.

The researchers have discovered numerous sample of decorated sandstone, including chapel art depicting the Egyptian goddess.

- Ans
1. researchers have discovered
  2. including chapel art
  3. depicting the Egyptian goddess
  4. numerous sample of decorated sandstone

Question ID : 9895808011  
Chosen Option : 3

Q.6 Select the most appropriate option to fill in the blank.

Leadership \_\_\_\_\_ a rational approach to achieve success in any task.

- Ans
1. requiring
  2. require
  3. required
  4. requires

Question ID : 9895808015  
Chosen Option : 4

Q.7

Select the word which means the same as the group of words given.

Incapable of failure or error.

- Ans
1. Incurable
  2. Incurable
  3. Infallible
  4. Irredeemable

Question ID : 9895808030  
Chosen Option : 3

Q.8 Select the correctly spelt word.

- Ans
1. Miscelleneous
  2. Miscellaneous
  3. Miscellaneius
  4. Miscelaneous

Question ID : 9895808031  
Chosen Option : 1

Q.9 From the given options, identify the segment in the sentence which contains the grammatical error.

In the modern world, the computer is an amazing gift to mankind for doing two thing effortlessly.

- Ans
1. the computer is
  2. an amazing gift
  3. In the modern world
  4. for doing two thing effortlessly.

Question ID : 9895808010  
Chosen Option : 4

Q.1 Select the most appropriate word to fill in the blank.

Humans have a natural \_\_\_\_\_ to coordinate their movements with music.

- Ans
1. disability
  2. direction
  3. order
  4. tendency

Question ID : 9895808033  
Chosen Option : 4

Comprehension:

In the following passage some words have been deleted. Fill in the blanks with the help of the alternatives given.

The concept of sustainable development provides a (1) \_\_\_\_\_ for the integration of environmental policies and development strategies. Sustainable development (2) \_\_\_\_\_ to meet the needs and aspirations of the present without compromising the (3) \_\_\_\_\_ to meet those in the future. In other words, sustainable development is a (4) \_\_\_\_\_ of change in which the exploitation of resources, the direction of investments, technological development and institutional changes are all in harmony and (5) \_\_\_\_\_ both current and future potential to meet human needs and objectives.

SubQuestion No : 11

Q.1  
1 Select the most appropriate option that will fill in the blank number 1.

- Ans
- 1. comparison
  - 2. framework
  - 3. figure
  - 4. provision

Question ID : 9895808018  
Chosen Option : 4

Comprehension:

In the following passage some words have been deleted. Fill in the blanks with the help of the alternatives given.

The concept of sustainable development provides a (1) \_\_\_\_\_ for the integration of environmental policies and development strategies. Sustainable development (2) \_\_\_\_\_ to meet the needs and aspirations of the present without compromising the (3) \_\_\_\_\_ to meet those in the future. In other words, sustainable development is a (4) \_\_\_\_\_ of change in which the exploitation of resources, the direction of investments, technological development and institutional changes are all in harmony and (5) \_\_\_\_\_ both current and future potential to meet human needs and objectives.

SubQuestion No : 12

Q.1  
2 Select the most appropriate option that will fill in the blank number 2.

- Ans
- 1. diverts
  - 2. seeks
  - 3. rejects
  - 4. distracts

Question ID : 9895808019  
Chosen Option : 4

Comprehension:

In the following passage some words have been deleted. Fill in the blanks with the help of the alternatives given.

The concept of sustainable development provides a (1) \_\_\_\_\_ for the integration of environmental policies and development strategies. Sustainable development (2) \_\_\_\_\_ to meet the needs and aspirations of the present without compromising the (3) \_\_\_\_\_ to meet those in the future. In other words, sustainable development is a (4) \_\_\_\_\_ of change in which the exploitation of resources, the direction of investments, technological development and institutional changes are all in harmony and (5) \_\_\_\_\_ both current and future potential to meet human needs and objectives.

SubQuestion No : 13

Q.1  
3 Select the most appropriate option that will fill in the blank number 3.

- Ans  1. invention  
 2. operation  
 3. production  
 4. orientation

Question ID : 9895808020  
Chosen Option : 1

Comprehension:

In the following passage some words have been deleted. Fill in the blanks with the help of the alternatives given.

The concept of sustainable development provides a (1) \_\_\_\_\_ for the integration of environmental policies and development strategies. Sustainable development (2) \_\_\_\_\_ to meet the needs and aspirations of the present without compromising the (3) \_\_\_\_\_ to meet those in the future. In other words, sustainable development is a (4) \_\_\_\_\_ of change in which the exploitation of resources, the direction of investments, technological development and institutional changes are all in harmony and (5) \_\_\_\_\_ both current and future potential to meet human needs and objectives.

SubQuestion No : 14

Q.1  
4 Select the most appropriate option that will fill in the blank number 4.

- Ans  1. progress  
 2. permission  
 3. process  
 4. sample

Question ID : 9895808021  
Chosen Option : 1

Comprehension:

In the following passage some words have been deleted. Fill in the blanks with the help of the alternatives given.

The concept of sustainable development provides a (1) \_\_\_\_\_ for the integration of environmental policies and development strategies. Sustainable development (2) \_\_\_\_\_ to meet the needs and aspirations of the present without compromising the (3) \_\_\_\_\_ to meet those in the future. In other words, sustainable development is a (4) \_\_\_\_\_ of change in which the exploitation of resources, the direction of investments, technological development and institutional changes are all in harmony and (5) \_\_\_\_\_ both current and future potential to meet human needs and objectives.

SubQuestion No : 15

Q.1  
5 Select the most appropriate option that will fill in the blank number 5.

- Ans
- 1. dismiss
  - 2. enhance
  - 3. resist
  - 4. relieve

Question ID : 9895808022  
Chosen Option : 2

Q.1  
6 Select the synonym of the given word.

BREACH

- Ans
- 1. Restriction
  - 2. Violation
  - 3. Settlement
  - 4. Restraint

Question ID : 9895808024  
Chosen Option : 3

Q.1  
7 Select the most appropriate option to substitute the underlined segment in the given sentence. If there is no need to substitute it, select No improvement.

Some people are so good that a mere looks at them pleases you a lot.

- Ans
- 1. No Improvement
  - 2. a mere look at their pleases you
  - 3. a mere looks at them pleases you
  - 4. a mere look at them pleases you

Question ID : 9895808013  
Chosen Option : 3

Q.1  
8 Select the most appropriate word to fill in the blank.

There is a high degree of \_\_\_\_\_ from e - mail based to social -media based messaging globally.

- Ans
- 1. transition
  - 2. process
  - 3. transaction

4. method

Question ID : 9895808034  
Chosen Option : 3

Q.1  
9 Select the word which means the same as the group of words given.

A cold - blooded vertebrate typically living on land but breeding in water.

- Ans  1. Fish  
 2. Amphibians  
 3. Mammals  
 4. Reptiles

Question ID : 9895808029  
Chosen Option : 3

Q.2  
0 Select the antonym of the given word.

LOGICAL

- Ans  1. Practical  
 2. Contradictory  
 3. Sensible  
 4. Useful

Question ID : 9895808025  
Chosen Option : 3

Q.2  
1 Select the option that means the same as the given idiom.

Apples and Oranges.

- Ans  1. Two unlike things or people  
 2. People working together on a project  
 3. People with similar approaches  
 4. Two similar situations with likely results

Question ID : 9895808028  
Chosen Option : 4

Q.2  
2 From the given options, identify the segment in the sentence which contains the grammatical error.

A clear and defined perception enabled her to dismissed the suggestion given by some people around her.

- Ans  1. suggestion given by  
 2. clear and defined  
 3. some people around her.  
 4. enabled her to dismissed

Question ID : 9895808009  
Chosen Option : 1

Q.2  
3



Select the antonym of the given word.

PAUCITY

- Ans
1. Scarcity
  2. Surplus
  3. Availability
  4. Shortage

Question ID : 9895808026  
Chosen Option : 4

Q.2  
4 Select the correctly spelt word.

- Ans
1. Refrigerator
  2. Refreegerator
  3. Refrigerator
  4. Refridgerator

Question ID : 9895808032  
Chosen Option : 3

Q.2  
5 Select the option that means the same as the given idiom.

To burn the midnight oil.

- Ans
1. To eat something at midnight
  2. To use oil for burning a lamp
  3. To work till very late in the night
  4. To fight with someone at midnight

Question ID : 9895808027  
Chosen Option : 1

Section : Hindi Language

Q.1 सही वर्तनी वाले शब्द का चयन करें।

- Ans
1. मखनचोर
  2. माखनचौर
  3. माकनचोर
  4. माखनचोर

Question ID : 9895806811  
Chosen Option : --

Q.2 निम्नलिखित में से उस विकल्प का चयन करें जो 'हरी झंडी दिखाना' मुहावरे का अर्थ व्यक्त करता है।

- Ans
1. पीछे चलने का संकेत देना
  2. हरियाली होने का संकेत होना

3. आगे बढ़ने का संकेत देना
4. पीछे होने का संकेत देना

Question ID : 9895806807  
Chosen Option : --

Q.3 दिये गये वाक्यांश के लिए एक शब्द दीजिये।

जिसका कोई आधार न हो

- Ans
1. मूलाधार
  2. मूसलाधार
  3. निराधार
  4. साधार

Question ID : 9895806809  
Chosen Option : --

Q.4 दिए गए शब्द के पर्यायवाची शब्द का चयन करें।

व्यवधान

- Ans
1. मिलन
  2. बाधा
  3. प्रीति
  4. भ्रमण

Question ID : 9895806805  
Chosen Option : --

Q.5 रिक्त स्थान को भरने के लिए उपयुक्त शब्द का चयन करें।

बागों में \_\_\_\_\_ खेलते हैं।

- Ans
1. भौरे
  2. फूल
  3. पक्षी
  4. लड़के

Question ID : 9895806796  
Chosen Option : --

Comprehension:

निम्नलिखित गद्यांश के रिक्त स्थानों की पूर्ति गद्यांश के नीचे दिए गए प्रश्नों के अनुसार कीजिए-

प्रदूषण आज के समय का सबसे बड़ा \_\_\_\_\_ (1) है। प्रदूषण के बढ़ने से धरती पर बहुत सी \_\_\_\_\_ (2) पैदा हो गयीं जिसे समय रहते न \_\_\_\_\_ (3) गया तो वो दिन दूर नहीं जब धीरे- धीरे सब खतम हो जायेगा। प्रदूषण के तत्त्व \_\_\_\_\_ (4) द्वारा उत्पन्न किये गये पदार्थ या वेस्ट मटेरियल होते हैं जो प्राकृतिक संसाधन जैसे कि वायु, जल और भूमि आदि को प्रदूषित करते हैं। प्रदूषण जहरीली गैस, कीटनाशक, शाकनाशी, ध्वनि, कार्बनिक मिश्रण, रेडियोधर्मी \_\_\_\_\_ (5) हो सकते हैं।

SubQuestion No : 6

Q.6 गद्यांश में संकेतित रिक्त स्थान (1) के लिए उपयुक्त शब्द होगा।

- Ans
1. अभिशाप
  - ✗ 2. सफलता
  3. कर्तव्य
  - ✗ 4. वरदान

Question ID : 9895806798

Chosen Option : --

Comprehension:

निम्नलिखित गद्यांश के रिक्त स्थानों की पूर्ति गद्यांश के नीचे दिए गए प्रश्नों के अनुसार कीजिए-

प्रदूषण आज के समय का सबसे बड़ा \_\_\_\_\_ (1) है। प्रदूषण के बढ़ने से धरती पर बहुत सी \_\_\_\_\_ (2) पैदा हो गयीं जिसे समय रहते न \_\_\_\_\_ (3) गया तो वो दिन दूर नहीं जब धीरे- धीरे सब खतम हो जायेगा। प्रदूषण के तत्त्व \_\_\_\_\_ (4) द्वारा उत्पन्न किये गये पदार्थ या वेस्ट मटेरियल होते हैं जो प्राकृतिक संसाधन जैसे कि वायु, जल और भूमि आदि को प्रदूषित करते हैं। प्रदूषण जहरीली गैस, कीटनाशक, शाकनाशी, ध्वनि, कार्बनिक मिश्रण, रेडियोधर्मी \_\_\_\_\_ (5) हो सकते हैं।

SubQuestion No : 7

Q.7 गद्यांश में संकेतित रिक्त स्थान (2) के लिए उपयुक्त शब्द होगा।

- Ans
1. कथाएं
  2. घटनाएं
  3. उम्मीदें

Comprehension:

निम्नलिखित गद्यांश के रिक्त स्थानों की पूर्ति गद्यांश के नीचे दिए गए प्रश्नों के अनुसार कीजिए-

प्रदूषण आज के समय का सबसे बड़ा \_\_\_\_\_ (1) है। प्रदूषण के बढ़ने से धरती पर बहुत सी \_\_\_\_\_ (2) पैदा हो गयीं जिसे समय रहते न \_\_\_\_\_ (3) गया तो वो दिन दूर नहीं जब धीरे- धीरे सब खतम हो जायेगा। प्रदूषण के तत्त्व \_\_\_\_\_ (4) द्वारा उत्पन्न किये गये पदार्थ या वेस्ट मटेरियल होते हैं जो प्राकृतिक संसाधन जैसे कि वायु, जल और भूमि आदि को प्रदूषित करते हैं। प्रदूषण जहरीली गैस, कीटनाशक, शाकनाशी, ध्वनि, कार्बनिक मिश्रण, रेडियोधर्मी \_\_\_\_\_ (5) हो सकते हैं।

SubQuestion No : 8

Q.8 गद्यांश में संकेतित रिक्त स्थान (3) के लिए उपयुक्त शब्द होगा।

- Ans
1. उठाया
  2. रोका
  3. बढ़ाया
  4. लगाया

Comprehension:

निम्नलिखित गद्यांश के रिक्त स्थानों की पूर्ति गद्यांश के नीचे दिए गए प्रश्नों के अनुसार कीजिए-

प्रदूषण आज के समय का सबसे बड़ा \_\_\_\_\_ (1) है। प्रदूषण के बढ़ने से धरती पर बहुत सी \_\_\_\_\_ (2) पैदा हो गयीं जिसे समय रहते न \_\_\_\_\_ (3) गया तो वो दिन दूर नहीं जब धीरे- धीरे सब खतम हो जायेगा। प्रदूषण के तत्त्व \_\_\_\_\_ (4) द्वारा उत्पन्न किये गये पदार्थ या वेस्ट मटेरियल होते हैं जो प्राकृतिक संसाधन जैसे कि वायु, जल और भूमि आदि को प्रदूषित करते हैं। प्रदूषण जहरीली गैस, कीटनाशक, शाकनाशी, ध्वनि, कार्बनिक मिश्रण, रेडियोधर्मी \_\_\_\_\_ (5) हो सकते हैं।

SubQuestion No : 9

Q.9

गद्यांश में संकेतित रिक्त स्थान (4) के लिए उपयुक्त शब्द होगा।

- Ans
1. पहाड़ों
  2. पेड़ों
  3. मनुष्यों
  4. नदियों

Question ID : 9895806801  
Chosen Option : --

Comprehension:

निम्नलिखित गद्यांश के रिक्त स्थानों की पूर्ति गद्यांश के नीचे दिए गए प्रश्नों के अनुसार कीजिए-

प्रदूषण आज के समय का सबसे बड़ा \_\_\_\_\_ (1) है। प्रदूषण के बढ़ने से धरती पर बहुत सी \_\_\_\_\_ (2) पैदा हो गयीं जिसे समय रहते न \_\_\_\_\_ (3) गया तो वो दिन दूर नहीं जब धीरे- धीरे सब खतम हो जायेगा। प्रदूषण के तत्त्व \_\_\_\_\_ (4) द्वारा उत्पन्न किये गये पदार्थ या वेस्ट मटेरियल होते हैं जो प्राकृतिक संसाधन जैसे कि वायु, जल और भूमि आदि को प्रदूषित करते हैं। प्रदूषण जहरीली गैस, कीटनाशक, शाकनाशी, ध्वनि, कार्बनिक मिश्रण, रेडियोधर्मी \_\_\_\_\_ (5) हो सकते हैं।

SubQuestion No : 10

Q.1  
0 गद्यांश में संकेतित रिक्त स्थान (5) के लिए उपयुक्त शब्द होगा।

- Ans
1. हथियार
  2. पदार्थ
  3. यथार्थ
  4. विचार

Question ID : 9895806802  
Chosen Option : --

Q.1  
1 दिए गए वाक्य का वह भाग ज्ञात करें जिसमें कोई त्रुटि है।

लोकतंत्र एक राजनीतिक व्यवस्था है जो लोगों को सम्मान मानती है।

- Ans
1. सम्मान मानती है।
  2. लोकतंत्र एक
  3. जो लोगों को
  4. राजनीतिक व्यवस्था है

Question ID : 9895806787  
Chosen Option : --

Q.1  
2 रिक्त स्थान को भरने के लिए उपयुक्त शब्द का चयन करें।

बाहर लकड़ी के \_\_\_\_\_ पड़े हुए हैं।

Ans

- 1. झुंड
- 2. मलबे
- 3. समूह
- 4. गड्ढर

Question ID : 9895806795  
Chosen Option : --

Q.1  
3 दिए गए वाक्य में रेखांकित खंड को प्रतिस्थापित करने के लिए उपयुक्त विकल्प का चयन करें।

वह पिछले वर्ष हरिद्वार गया था।

Ans

- 1. गत
- 2. आगामी
- 3. गया
- 4. भावी

Question ID : 9895806792  
Chosen Option : --

Q.1  
4 दिए गए वाक्य का वह भाग ज्ञात करें जिसमें कोई त्रुटि है।

विज्ञान के युग ने समय की महत्व बहुत बढ़ा दिया है।

Ans

- 1. विज्ञान के
- 2. युग ने
- 3. समय की महत्व
- 4. बहुत बढ़ा दिया है।

Question ID : 9895806789  
Chosen Option : --

Q.1  
5 निम्नलिखित में से उस विकल्प का चयन करें जो 'विशंकु होना' मुहावरे का अर्थ व्यक्त करता है।

Ans

- 1. शंकालु होना
- 2. अधर में लटकना
- 3. इधर-उधर होना
- 4. सब जगह रहने वाला

Q.1  
6 दिए गए वाक्य में रेखांकित खंड को प्रतिस्थापित करने के लिए उपयुक्त विकल्प का चयन करें।

अर्जुन के षोडश वर्षीय पुत्र अभिमन्यु ने चक्रव्यूह तोड़ा।

- Ans
1. वीर
  2. सोलह
  3. छह
  4. जवान

Q.1  
7 सही वर्तनी वाले शब्द का चयन करें।

- Ans
1. भूलककड़
  2. भुल्ककड़
  3. भुलककड़
  4. भुलककड़

Q.1  
8 दिए गए वाक्य का वह भाग जात करें जिसमें कोई त्रुटि है।

समूहों के लोगों की आपसी मेल-मिलाप के तौर-तरीकों का जटिल स्वरूप ही समाज है।

- Ans
1. समाज है।
  2. जटिल स्वरूप ही
  3. समूहों के लोगों की
  4. आपसी मेल-मिलाप के तौर-तरीकों का

Q.1  
9 दिये गये वाक्यांश के लिए एक शब्द दीजिये।

इतिहास से संबंधित

- Ans
1. इतिहासिक
  2. सैद्धांतिक
  3. पौराणिक
  4. ऐतिहासिक

Q.2  
0 दिए गए शब्द के पर्यायवाची शब्द का चयन करें।

अवगुण

Ans

1. द्वेष
2. गुण
3. प्रेम
4. दोष

Question ID : 9895806806  
Chosen Option : --

Q.2  
1 रिक्त स्थान को भरने के लिए उपयुक्त शब्द का चयन करें।

सैनिक देश की \_\_\_\_\_ करते हैं।

Ans

1. दवा
2. निर्माण
3. रक्षा
4. वकालत

Question ID : 9895806794  
Chosen Option : --

Q.2  
2 दिए गए शब्द का विलोम चुनें।

निशा

Ans

1. दशा
2. दवा
3. दिवा
4. दिशा

Question ID : 9895806804  
Chosen Option : --

Q.2  
3 दिए गए वाक्य में रेखांकित खंड को प्रतिस्थापित करने के लिए उपयुक्त विकल्प का चयन करें।

शीतल वायु चल रही है।

Ans

1. ठंडी
2. सुगंधि
3. अनल
4. सुरभि

Question ID : 9895806790  
Chosen Option : --



Q.2  
4 रिक्त स्थान को भरने के लिए उपयुक्त शब्द का चयन करें।

पुस्तक का \_\_\_\_\_ फट गया।

Ans

- 1. पन्ना
- 2. अक्षर
- 3. व्याकरण
- 4. रंग

Question ID : 9895806793  
Chosen Option : --

Q.2  
5 दिए गए शब्द का विलोम चुनें।

असफल

Ans

- 1. विफल
- 2. सफल
- 3. सरल
- 4. अफल

Question ID : 9895806803  
Chosen Option : --

## Constable (GD) in CAPFs, NIA, SSF and Rifleman (GD) in Assam Rifles Examination, 2018

Roll No. :	
Registration No.	
Name :	
Exam Venue :	iON Digital Zone iDZ Kuberpur
Exam Time :	4:00 PM - 5:30 PM
Exam Date :	03/03/2019

Section : General Section

**Q.1** Select the option that is related to the third term in the same way as the first term is related to the second term.

35 : 15 :: 72 : ?

- Ans  1. 14  
 2. 54  
 3. 27  
 4. 15

Question ID : 9895808354  
 Chosen Option : 2

**Q.2**

Select the related word pair from the given alternatives.

India : Rupee :: \_\_\_\_\_ :

- Ans  1. South Africa : Pound  
 2. Switzerland : Euro  
 3. Russia : Ruble  
 4. China : Yen

Question ID : 9895808343  
 Chosen Option : 2

**Q.3**

Select the correct option that will fill in the blank and complete the series.

145, 100, 65, 40, ?

- Ans  1. 25  
 2. 10  
 3. 20  
 4. 15

Question ID : 9895808352  
 Chosen Option : 1

**Q.4**

Select the correct option that will fill in the blank and complete the series.

2, 8, 32, 128, 512, ?

- Ans  1. 2067  
 2. 2048

~~3.~~ 2507

~~4.~~ 2536

Question ID : 9895808353  
Chosen Option : 2

**Q.5** A piece of paper is folded and cut as shown in the question figures, indicate how it will appear when opened?

Question figures:



Ans



Question ID : 9895808362  
Chosen Option : 2

**Q.6** Five monkeys A, B, C, D and E are sitting on a branch of a tree. C is sitting next to D. D is not sitting with E. E is on the left end of the branch. C is on second position from right. A is immediate right of B and B is on the right side of E. A and C are sitting together. Who is sitting at the centre?

Ans

1. D

2. A

3. C

4. B

Question ID : 9895808347  
Chosen Option : 2

**Q.7** The statements below are followed by two conclusions labeled I and II. Assuming that the information in the statements is true, even if it appears to be at variance with generally established facts, decide which conclusion(s) logically and definitely follow(s) from the information given in the statements.

Statements:

Some scooters are planes.  
Some planes are dogs.  
Some dogs are plants.

Conclusions:

- I. Some plants are scooters.
- II. No plane is scooter.

Ans

1. Only Conclusion I follows.

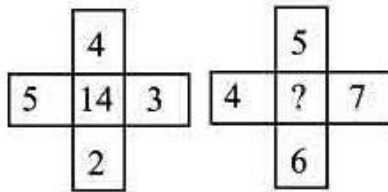
2. Only Conclusion II follows.

3. Neither Conclusion I nor II follows.

4. Either Conclusion I or II follows.

Question ID : 9895808351  
Chosen Option : 3

Q.8 Find the missing number from the below options.



- Ans  1. 4  
 2. 6  
 3. 7  
 4. 3

Question ID : 9895808356  
Chosen Option : 4

Q.9 X, Y, Z, P, Q and R are sitting in a row facing north. X is the neighbour of Y and P. Q is the neighbour of Z and R, P is to the right of X and P and Z are immediate neighbours.

Which pair sits on the extreme ends?

- Ans  1. P,Z  
 2. Y,P  
 3. X,P  
 4. Y,R

Question ID : 9895808348  
Chosen Option : 4

Q.1 Select the option that is related to the third term in the same way as the first term is related to the second term.

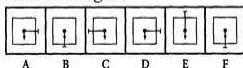
0  
Hand : Finger :: Leg : \_\_\_\_\_

- Ans  1. Heel  
 2. Walk  
 3. Knee  
 4. Toes

Question ID : 9895808342  
Chosen Option : 4

Q.1 Identify the two figures from the following set of figures which are out of position and require interchange of positions to put the entire series in order.

Problem Figure



- Ans  1. (D & F)  
 2. (D & E)  
 3. (A & C)  
 4. (B & D)

Question ID : 9895808358  
Chosen Option : 2

Q.1

2 If a mirror is placed on the line MN, then which of the answer figures is the right image of the given figure?

Question Figure:



Ans

✓ 1.



✗ 2.



✗ 3.

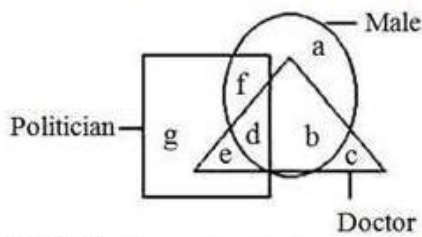


✗ 4.



Question ID : 9895808361  
Chosen Option : 1

Q.1 Study the following Venn-diagram and answer the given question.



Which letter represents a male politician only?

Ans ✗ 1. d

✗ 2. b

✗ 3. e

✓ 4. f

Question ID : 9895808363  
Chosen Option : 4

Q.1 Select the correct option that will fill in the blank and complete the series.

WVU, RQP, MLK, ?

Ans ✗ 1. HGI

✗ 2. IGF

✓ 3. HGF

✗ 4. JHI

Question ID : 9895808339  
Chosen Option : 3

Q.1 In a certain code, ANIMAL is coded as INALAM, then how is SAMPLE coded in the same way?

Ans 1.

- 2. MSALEP
- 3. MALESP
- 4. ASMALE

Question ID : 9895808345  
Chosen Option : 1

**Q.1** The statements below are followed by two conclusions labeled I and II. Assuming that the information in the statements is true, even if it appears to be at variance with generally established facts, decide which conclusion(s) logically and definitely follow(s) from the information given in the statements.

6

**Statements:**

All kids are Adults.  
Some Adults are old.

**Conclusion:**

- I. All old are kids.
- II. Some kids are old.

**Ans**

- 1. Neither conclusion I nor II follows
- 2. Either conclusion I or II follows
- 3. Only conclusion II follows
- 4. Only conclusion I follows

Question ID : 9895808350  
Chosen Option : 2

**Q.1** Choose the option figure in which the problem figure is hidden/embedded.

7

**Questions Figure:**



**Ans**

- 1.
- 2.
- 3.
- 4.

Question ID : 9895808360  
Chosen Option : 1

**Q.1** Four options have been given out of which three are alike in some manner, while one is different. Choose the odd one.

8

- 1. 473
- 2. 287
- 3. 693
- 4. 385

Question ID : 9895808355

Q.1 Four letter clusters have been given out of which three are alike in some manner, while one is different. Choose the odd one.

- Ans
- 1. HMR
  - 2. JOT
  - 3. INS
  - 4. DLT

Question ID : 9895808340

Chosen Option : 4

Q.2 In a class of 45 students, a boy is ranked 20<sup>th</sup>. When two boys joined, his rank was dropped by one. What is his new rank from the end?

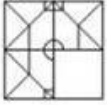
- Ans
- 1. 25<sup>th</sup>
  - 2. 27<sup>th</sup>
  - 3. 28<sup>th</sup>
  - 4. 26<sup>th</sup>

Question ID : 9895808349

Chosen Option : 2

Q.2 Which of the following answer figure will complete the given figure?

Question figure:



- Ans
- 1.
  - 2.
  - 3.
  - 4.

Question ID : 9895808359

Chosen Option : 2

Q.2 Four words have been given out of which three are alike in some manner, while one is different. Choose the odd one.

- Ans
- 1. Kuchipudi
  - 2. Hemis
  - 3. Kathakali
  - 4. Sattriya

Question ID : 9895808341

Chosen Option : 2

Q.2 If SENSIBLE is written as 10 and SAMUELS as 9, how will NADAL be written?  
3

- Ans
- 1. 11
  - 2. 4
  - 3. 9
  - 4. 7

Question ID : 9895808346  
Chosen Option : 4

Q.2 Select the option that is related to the third term in the same way as the first term is related to the second term.  
4

AFK : EJO :: PUZ : ?

- Ans
- 1. UOM
  - 2. USC
  - 3. TXE
  - 4. TYD

Question ID : 9895808344  
Chosen Option : 4

Q.2 Select the correct combination of mathematical signs to replace '\*\*' signs and to balance the given equation:  
5

$78 * 3 * 4 * 36 * 140$

- Ans
- 1.  $++\div=$
  - 2.  $-+\times=$
  - 3.  $\div\times--=$
  - 4.  $+\times+=$

Question ID : 9895808357  
Chosen Option : 4

Q.2 Name the devotional folk music of Manipur usually sung by a group of people.  
6

- Ans
- 1. Gha To Kito
  - 2. Khubak eshei
  - 3. Banvarh
  - 4. Domkach

Question ID : 9895807403  
Chosen Option : 1

Q.2 Who won the 2018 French Open Men's Tennis?  
7

- Ans
- 1. Andy Murray
  - 2. Novak Djokovic
  - 3. Rafael Nadal
  - 4. Roger Federer

Question ID : 9895807407  
Chosen Option : 2

Q.2 The harvest festival, Puthari is celebrated by which tribes?  
8

Ans



- 1. Garo
- 2. Angami
- 3. Kodava
- 4. Monpa

Question ID : 9895807404  
Chosen Option : 2

Q.2 The battle of Karnal (1739) was won by Persian King Nadir Shah by defeating the army of \_\_\_\_\_.

- Ans
- 1. Ghulam Muhammad Ghouse Khan
  - 2. Mughal Emperor, Muhammad Shah
  - 3. Shuja-ud-Daulah, the Nawab of Awadh
  - 4. Ghiyas-ud-din Balban

Question ID : 9895807427  
Chosen Option : 2

Q.3 Titan the second largest moon in our solar system orbits around the planet \_\_\_\_\_.

- Ans
- 1. Jupiter
  - 2. Neptune
  - 3. Saturn
  - 4. Uranus

Question ID : 9895807424  
Chosen Option : 3

Q.3 Fundamental duties in the Indian constitution are borrowed from the constitution of \_\_\_\_\_.

- Ans
- 1. Britain
  - 2. Canada
  - 3. France
  - 4. USSR

Question ID : 9895807414  
Chosen Option : 4

Q.3 Name the unit in which the calorific value of fuel is expressed.

- Ans
- 1. Kilojoule
  - 2. Kilogram
  - 3. Kelvin
  - 4. Candela

Question ID : 9895807420  
Chosen Option : 1

Q.3 Which island emerged in the Bay of Bengal in the aftermath of the Bhola cyclone in 1970?

- Ans
- 1. Ghoramara Island
  - 2. Jambudwip

- 3. Lohachara Island
- 4. New Moore Island

Question ID : 9895807423  
Chosen Option : 2

Q.3 The fundamental rights of citizens are embodied in which part of the Indian Constitution?

4

- Ans  1. Part III
- 2. Part IVA
  - 3. Part I
  - 4. Part VII

Question ID : 9895807415  
Chosen Option : 1

Q.3 Centripetal force 'F' required for circular motion of an object of mass 'm' moving in a circle of radius 'r' at a tangential velocity 'v' is equal to \_\_\_\_\_.

5

- Ans  1.  $mr^2/v$
- 2.  $mv/r^2$
  - 3.  $mv^2/r$
  - 4.  $mr/v^2$

Question ID : 9895807417  
Chosen Option : 3

Q.3 The women's team from which country won the 2018 Carrom World Cup, held in South Korea?

6

- Ans  1. India
- 2. South Korea
  - 3. Japan
  - 4. China

Question ID : 9895807406  
Chosen Option : 1

Q.3 Which of the following dances is a dance form from Arunachal Pradesh?

7

- Ans  1. Lezim
- 2. Chiraw
  - 3. Macha
  - 4. Popir

Question ID : 9895807405  
Chosen Option : 3

Q.3 Minimum Support Price for 2018-19 for Jowar of the Hybrid variety is set at \_\_\_\_\_.

8

- Ans  1. ₹5,150 per quintal
- 2. ₹1,750 per quintal
  - 3. ₹2,430 per quintal

4. ₹1,950 per quintal

Question ID : 9895807413  
Chosen Option : 3

Q.3 The Union Budget 2018 announced that Operation Green will be launched for agriculture with a corpus of \_\_\_\_\_.

9

- Ans
- 1. ₹1,000 crore
  - 2. ₹100 crore
  - 3. ₹500 crore
  - 4. ₹5,000 crore

Question ID : 9895807412  
Chosen Option : 4

Q.4 The Economic Survey report 2017-18 stated that the Agriculture growth in FY18 was likely to be at \_\_\_\_\_.

0

- Ans
- 1. 2.10%
  - 2. 3.90%
  - 3. 4.30%
  - 4. 5.50%

Question ID : 9895807411  
Chosen Option : 4

Q.4 Tesla is the unit of \_\_\_\_\_.

1

- Ans
- 1. electric conductance
  - 2. magnetic flux density
  - 3. capacitance
  - 4. magnetic flux

Question ID : 9895807418  
Chosen Option : 4

Q.4 Name the Indian ruler of Harkanya dynasty who was the son of Ajatashatru and who laid the foundation of the city of

2 Pataliputra.

- Ans
- 1. Nandivardhana
  - 2. Mahanandin
  - 3. Pradyota
  - 4. Udayin

Question ID : 9895807425  
Chosen Option : 4

Q.4 Name the Bharat Ratna recipient who was a social reformer and educator. He played a vital role in the upliftment of

3 women.

- Ans
- 1. Govind Ballabh Pant
  - 2. M Visvesvaraya
  - 3. Dhondo Keshav Karve
  - 4. Bidhan Chandra Roy

Question ID : 9895807408  
Chosen Option : 1

Q.4  
4 Which of the following is a book by Vikram Seth?

- Ans
- 1. Riot At Misri Mandi
  - 2. The Ocean of Churn
  - 3. The Mistress of Spices
  - 4. River of Smoke

Question ID : 9895807409  
Chosen Option : 1

Q.4  
5 The humerus is part of the \_\_\_\_\_.

- Ans
- 1. leg
  - 2. arm
  - 3. shoulder girdle
  - 4. spine

Question ID : 9895807421  
Chosen Option : 1

Q.4  
6 Which gland controls the functioning of other endocrine glands?

- Ans
- 1. Pituitary gland
  - 2. Pineal Gland
  - 3. Thyroid Gland
  - 4. Adrenal glands

Question ID : 9895807419  
Chosen Option : 1

Q.4  
7 The \_\_\_\_\_ was an Act of the Parliament of Great Britain intended to overhaul the management of the East India Company's rule in India.

- Ans
- 1. Government of India Act of 1858
  - 2. Indian Councils Act of 1861
  - 3. Pitt's India Act
  - 4. Regulating Act 1773

Question ID : 9895807416  
Chosen Option : 4

Q.4  
8 Who is the first Indian to win the Miss Earth pageant since its inception in 2001?

- Ans
- 1. Nicole Faria
  - 2. Reita Faria
  - 3. Dia Mirza
  - 4. Priyanka Chopra

Question ID : 9895807410  
Chosen Option : 3

Q.4  
9 Name the first Indian to qualify for the Indian Civil Service.

- Ans  1. V. O. Chidambaram Pillai
2. Satyendranath Tagore
3. Dadabhai Naoroji
4. Bankim Chandra Chatterjee

Question ID : 9895807426  
Chosen Option : 2

Q.5  
0 Which city is NOT situated on the Banks of the Chambal River?

- Ans 1. Dholpur
2. Gwalior
3. Kota
4. Jabalpur

Question ID : 9895807422  
Chosen Option : 3

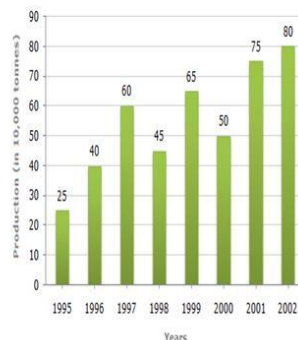
Q.5  
1 Gold is 12 times as heavy as aluminum and copper is 5 times as heavy as aluminum. In what ratio gold and copper should be mixed to get an alloy 8 times of aluminum.

- Ans  1. 1 : 2
2. 3 : 4
3. 2 : 1
4. 4 : 3

Question ID : 9895807739  
Chosen Option : 2

Q.5  
2

Production of Fertilizers by a Company  
(in 1000 tonnes) Over the Years



Study the bar chart and answer the question based on it.

The average production of 1999 and 2000 was less than the average production of which of the following pairs of years?

- Ans  1. 2000 and 2001
2. 1995 and 2001
3. 1998 and 2000
4. 1996 and 1997

Question ID : 9895807752  
Chosen Option : 1

Q.5

3 Vishal covers a distance of 20km in 30min. If he covers half of the distance in 18 min, what should be his speed to cover the remaining distance and completes the whole journey in 30min.

- Ans
- 1. 55 km/hr
  - 2. 65 km/hr
  - 3. 60 km/hr
  - 4. 50 km/hr

Question ID : 9895807746

Chosen Option : 4

Q.5 A cloth was 50cm broad and 8 cm long. When washed, it was found to have lost 25% of its length and 14% of its breath. Then the percentage decreased in area is \_\_\_\_\_.

- Ans
- 1. 34.5%
  - 2. 35.5%
  - 3. 36%
  - 4. 35%

Question ID : 9895807749

Chosen Option : 2

Q.5 Find the number of years in which an amount invested at 8% p.a. simple interest doubles itself.

- Ans
- 1. 11 years
  - 2. 12 years
  - 3. 12 ½ years
  - 4. 10 ½ years

Question ID : 9895807741

Chosen Option : 3

Q.5 Manjeet singh sold an article for ₹ 9000 gaining  $\frac{1}{5}$  of its C.P. Find the gain % .

- Ans
- 1. 22%
  - 2. 10%
  - 3. 25%
  - 4. 20%

Question ID : 9895807736

Chosen Option : 4

Q.5 In an election contest between A and B, A wins by the margin of 480 votes. If A gets 70% of the total votes, then total votes are

- Ans
- 1. 4800
  - 2. 1200
  - 3. 1400
  - 4. 1600

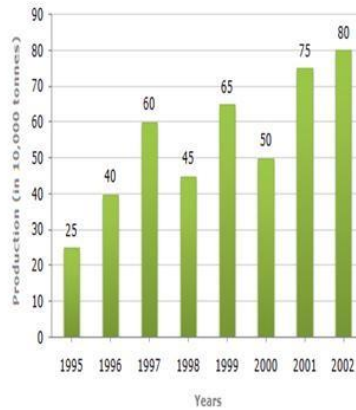
Question ID : 9895807735

Chosen Option : 2

Q.5  
8

### Production of Fertilizers by a Company

(in 1000 tonnes) Over the Years



Study the bar chart and answer the question based on it.

What was the percentage increase in the production of fertilizers in 2001 compared to that in 2000?

- Ans
- 1. 30%
  - 2. 25%
  - 3. 50%
  - 4. 40%

Question ID : 9895807750  
Chosen Option : 3

Q.5 In a mixture of 60 liters, milk and water are in the ratio 2:1, find the quantity of water to be added to make the ratio 4:3

- Ans
- 1. 20 liters
  - 2. 10 liters
  - 3. 15 liters
  - 4. 12 liters

Question ID : 9895807738  
Chosen Option : 2

Q.6 Simplify:

$$5.25 + \frac{3}{4} \text{ of } 16 - 5$$
$$\frac{1}{2} \text{ of } (9.5 - 2.5) - (5 \times 0.35)$$

- Ans
- 1. 4
  - 2. 7
  - 3. 5
  - 4. 6

Question ID : 9895807730  
Chosen Option : 2

Q.6 If a shopkeeper gives 20% discount and then 15% discount on a book, which has the marked price of ₹850, how much would be the selling price of the book?

- Ans
- 1. ₹578
  - 2. ₹785
  - 3. ₹758

4. ₹587

Question ID : 9895807733  
Chosen Option : 1

Q.6  
2 Simplify:

$$7.8 - 0.4 \text{ of } (5.1 - 3.8) + 9.3 \times 1.5$$

- Ans  1. 23.12  
 2. 12.23  
 3. 21.23  
 4. 23.21

Question ID : 9895807729  
Chosen Option : 3

Q.6  
3 If 15 workers can earn ₹1,800 in 10 days. Find the earning (in ₹) of 5 workers in 8 days.

- Ans  1. ₹480  
 2. ₹540  
 3. ₹360  
 4. ₹400

Question ID : 9895807743  
Chosen Option : 1

Q.6  
4 The price of a scooter which was bought for ₹84,000 depreciates at the rate of 10% p.a. Find its price after 2 years?

- Ans  1. ₹68040  
 2. ₹46080  
 3. ₹64800  
 4. ₹86040

Question ID : 9895807742  
Chosen Option : 1

Q.6  
5 What is the least number which when increased by 8 is exactly divisible by 4, 5, 6 and 7?

- Ans  1. 322  
 2. 412  
 3. 312  
 4. 422

Question ID : 9895807728  
Chosen Option : 2

Q.6  
6 A is twice as good as a workman as B. And together, they finish a piece of work in 20 days. In how many days, will A alone finish the work?

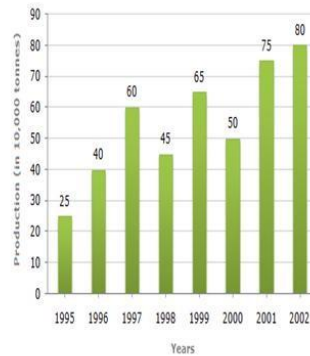
- Ans  1. 26 days  
 2. 30 days  
 3. 28 days  
 4. 25 days



Q.6  
7

Production of Fertilizers by a Company

(in 1000 tonnes) Over the Years



Study the bar chart and answer the question based on it.

In how many of the given years was the production of fertilizers less than the average production of the given years?

- Ans
- 1. 2
  - 2. 3
  - 3. 1
  - 4. 4

Question ID : 9895807751  
Chosen Option : 4

Q.6 Out of 12 terms, the average of first 6 terms is 36 and that of last 6 terms is 42. If the average of first 11 terms is 38, find the 12<sup>th</sup> term.

- Ans
- 1. 40
  - 2. 42
  - 3. 44
  - 4. 50

Question ID : 9895807732  
Chosen Option : 4

Q.6 The mean of a, b, c, d and e is 36. If the mean of b, d and e is 32, what is the mean of a and c?

- Ans
- 1. 46
  - 2. 42
  - 3. 44
  - 4. 24

Question ID : 9895807734  
Chosen Option : 2

Q.7 Om Prakash travels Bombay to Pune at a speed of 80km/hr and returns back to Bombay by increasing his speed by 50%, then his average speed for the whole journey is \_\_\_\_\_.

- Ans
- 1. 65 km/hr
  - 2. 69 km/hr
  - 3. 96 km/hr
  - 4. 67 km/hr

Question ID : 9895807745

Q.7 Sum of five consecutive even numbers is 40 more than the average of the numbers. Find the middle number in the series.

- Ans  1. 10  
 2. 40  
 3. 30  
 4. 20

Question ID : 9895807731  
 Chosen Option : 1

Q.7 A cuboidal tank has 48000 liters of water. Find the depth of water in the tank if length of the tank is 6m and breadth is 4m.

- Ans  1. 6 m  
 2. 3 m  
 3. 4 m  
 4. 2 m

Question ID : 9895807747  
 Chosen Option : 4

Q.7 If all the sides of a square are increased by 20%, then the area is increased by \_\_\_\_\_.

- Ans  1. 44%  
 2. 45%  
 3. 46%  
 4. 43%

Question ID : 9895807748  
 Chosen Option : 1

Q.7 A merchant claims that he sells his goods at CP. But uses a weight of 900g for the 1kg weight, find his gain %

- Ans  1. 12%  
 2.  $12\frac{1}{9}\%$   
 3.  $11\frac{1}{9}\%$   
 4. 11%

Question ID : 9895807737  
 Chosen Option : 3

Q.7 If ₹3800 is distributed among A, B, C such that A : B = 1 : 2 and B : C = 3 : 5, the find the share of B.

- Ans  1. ₹2000  
 2. ₹1400  
 3. ₹600  
 4. ₹1200

Question ID : 9895807740  
 Chosen Option : 4

**Comprehension:**

In the following passage some words have been deleted. Fill in the blanks with the help of the alternatives given.

Students should develop a quality of (1) \_\_\_\_\_ to elders and respecting their views. Their experience and knowledge can play a major role in shaping a student's personality and career. Students should (2) \_\_\_\_\_ this much - needed knowledge and experience from parents and teachers. Being (3) \_\_\_\_\_ helps students to keep themselves morally high. One should not get carried away by success. Students should also learn to respect (4) \_\_\_\_\_ views and cope with diverse situations. These qualities will play a vital role in the (5) \_\_\_\_\_ of teamwork and leadership skills.

**SubQuestion No : 1**

Q.1 Select the most appropriate option that will fill in the blank number 1.

- Ans  1. listen  
 2. listens  
 3. listening  
 4. listened

Question ID : 9895808070  
 Chosen Option : --

**Comprehension:**

In the following passage some words have been deleted. Fill in the blanks with the help of the alternatives given.

Students should develop a quality of (1) \_\_\_\_\_ to elders and respecting their views. Their experience and knowledge can play a major role in shaping a student's personality and career. Students should (2) \_\_\_\_\_ this much - needed knowledge and experience from parents and teachers. Being (3) \_\_\_\_\_ helps students to keep themselves morally high. One should not get carried away by success. Students should also learn to respect (4) \_\_\_\_\_ views and cope with diverse situations. These qualities will play a vital role in the (5) \_\_\_\_\_ of teamwork and leadership skills.

**SubQuestion No : 2**

Q.2 Select the most appropriate option that will fill in the blank number 2.

- Ans  1. access  
 2. measure  
 3. acquire  
 4. assess

Question ID : 9895808071  
 Chosen Option : --

**Comprehension:**

In the following passage some words have been deleted. Fill in the blanks with the help of the alternatives given.

Students should develop a quality of (1) \_\_\_\_\_ to elders and respecting their views. Their experience and knowledge can play a major role in shaping a student's personality and career. Students should (2) \_\_\_\_\_ this much - needed knowledge and experience from parents and teachers. Being (3) \_\_\_\_\_ helps students to keep themselves morally high. One should not get carried away by success. Students should also learn to respect (4) \_\_\_\_\_ views and cope with diverse situations. These qualities will play a vital role in the (5) \_\_\_\_\_ of teamwork and leadership skills.

SubQuestion No : 3

Q.3 Select the most appropriate option that will fill in the blank number 3.

- Ans
1. sharp
  2. simple
  3. intelligent
  4. smart

Question ID : 9895808072  
Chosen Option : --

Comprehension:

In the following passage some words have been deleted. Fill in the blanks with the help of the alternatives given.

Students should develop a quality of (1) \_\_\_\_\_ to elders and respecting their views. Their experience and knowledge can play a major role in shaping a student's personality and career. Students should (2) \_\_\_\_\_ this much - needed knowledge and experience from parents and teachers. Being (3) \_\_\_\_\_ helps students to keep themselves morally high. One should not get carried away by success. Students should also learn to respect (4) \_\_\_\_\_ views and cope with diverse situations. These qualities will play a vital role in the (5) \_\_\_\_\_ of teamwork and leadership skills.

SubQuestion No : 4

Q.4 Select the most appropriate option that will fill in the blank number 4.

- Ans
1. typical
  2. different
  3. general
  4. expressive

Question ID : 9895808073  
Chosen Option : --

Comprehension:

In the following passage some words have been deleted. Fill in the blanks with the help of the alternatives given.

Students should develop a quality of (1) \_\_\_\_\_ to elders and respecting their views. Their experience and knowledge can play a major role in shaping a student's personality and career. Students should (2) \_\_\_\_\_ this much - needed knowledge and experience from parents and teachers. Being (3) \_\_\_\_\_ helps students to keep themselves morally high. One should not get carried away by success. Students should also learn to respect (4) \_\_\_\_\_ views and cope with diverse situations. These qualities will play a vital role in the (5) \_\_\_\_\_ of teamwork and leadership skills.

SubQuestion No : 5

Q.5 Select the most appropriate option that will fill in the blank number 5.

- Ans  1. structure  
 2. development  
 3. manufacture  
 4. arrangement

Question ID : 9895808074  
Chosen Option : --

Q.6 From the given options, identify the segment in the sentence which contains the grammatical error.

A mere 43% of Indian woman own cellular phones, as opposed to almost 80% of men.

- Ans  1. A mere 43% of Indian woman  
 2. as opposed to  
 3. almost 80% of men  
 4. own cellular phones

Question ID : 9895808063  
Chosen Option : --

Q.7 Select the most appropriate option to fill in the blank.

People high in humility avoid expecting \_\_\_\_\_ special treatment.


- Ans  1. one  
 2. none  
 3. any  
 4. only

Question ID : 9895808067  
Chosen Option : --

Q.8 Select the option that means the same as the given idiom.

Bark up the wrong tree.

- Ans  1. To send dogs to track someone  
 2. To make no mistakes about doing something

 3. To make dogs bark at cats hiding in trees

 4.

To be wrong about the reason for or way of doing something

Question ID : 9895808080

Chosen Option : --

Q.9 Select the correctly spelt word.

- Ans
1. Vegaitarian
  2. Vegetarian
  -  3. Vezetarian
  4. Vegetaranian

Question ID : 9895808083

Chosen Option : --

Q.1 Select the most appropriate option to substitute the underlined segment in the given sentence. If there is no need to substitute it, select No improvement.

The National Sample Survey Directorate is first set up under the Ministry of Finance in 1950.


- Ans
1. Directorate had first set up
  2. No improvement
  3. Directorate was first set up
  4. Directorate were first set up

Question ID : 9895808065

Chosen Option : --

Q.1 Select the most appropriate word to fill in the blank.

The news of the general elections was covered by \_\_\_\_\_ media.

- Ans
-  1. sole
  2. single
  3. multiple
  4. singular

Question ID : 9895808085

Chosen Option : --

Q.1 Select the correctly spelt word.

- Ans
-  1. Audibal
  -  2. Audeuble
  -  3. Audible
  -  4. Audiable

Question ID : 9895808084

Chosen Option : --

Q.1  
3

From the given options, identify the segment in the sentence which contains the grammatical error.

An excellent response for his readers refreshes the author and stirs his creative sense and functional skills.

- Ans
- 1. his creative sense
  - 2. functional skills
  - 3. An excellent response
  - 4. for his readers refreshes

Question ID : 9895808061  
Chosen Option : --

Q.1 Select the most appropriate option to substitute the underlined segment in the given sentence. If there is no need to substitute it, select No improvement.

Your promotion will be depend the quality of your work.

- Ans
- 1. depends upon
  - 2. depend on
  - 3. will be dependent
  - 4. No improvement

Question ID : 9895808066  
Chosen Option : --

Q.1 Select the antonym of the given word.

COMMENCE

- Ans
- 1. Start
  - 2. Clamp
  - 3. Pause
  - 4. Close

Question ID : 9895808077  
Chosen Option : --

Q.1 Select the most appropriate word to fill in the blank.

A software tool used to read electronic documents is known as \_\_\_\_\_.

- Ans
- 1. internet
  - 2. motherboard
  - 3. broadband
  - 4. browser

Question ID : 9895808086  
Chosen Option : --

Q.1 Select the option that means the same as the given idiom.

To bite off more than you can chew.

- Ans
- 1. To take on a task too big for oneself
  - 2. To finish a work in bits and pieces
  - 3. To challenge someone to do difficult work

4. To eat very heavy and rich food

Question ID : 9895808079  
Chosen Option : --

Q.1  
8 Select the word which means the same as the group of words given.

Concerning appreciation of art.

- Ans
- 1. Particularistic
  - 2. Idealistic
  - 3. Poetic
  - 4. Aesthetic

Question ID : 9895808081  
Chosen Option : --

Q.1  
9 Select the word which means the same as the group of words given.

A story, poem or a picture that can be interpreted to reveal a hidden meaning.

- Ans
- 1. Simile
  - 2. Representation
  - 3. Allegory
  - 4. Resemblance

Question ID : 9895808082  
Chosen Option : --

Q.2  
0 Select the synonym of the given word.

RIDDLE

- Ans
- 1. Response
  - 2. Game
  - 3. Puzzle
  - 4. Reaction

Question ID : 9895808075  
Chosen Option : --

Q.2  
1 Select the antonym of the given word.

EXPAND

- Ans
- 1. Contract
  - 2. Express
  - 3. Deposit
  - 4. Collect

Question ID : 9895808078  
Chosen Option : --

Q.2  
2



Select the most appropriate option to substitute the underlined segment in the given sentence. If there is no need to substitute it, select No improvement.

While participating in the marathon an eighteen year old girl was knocked for by a passing truck.

- Ans
1. knocked up by
  2. No improvement
  3. knocked down by
  4. knocked in by

Question ID : 9895808064  
Chosen Option : --

Q.2  
3 Select the synonym of the given word.

IMPLICIT

- Ans
1. Unheard
  2. Tacit
  3. Honest
  4. Unclear

Question ID : 9895808076  
Chosen Option : --

Q.2 Select the most appropriate option to fill in the blank.

4

Online shopping platforms provide \_\_\_\_\_ information on books, groceries, medicines, etc. so that we can get the latest products.

- Ans
1. old
  2. instant
  3. timeworn
  4. previous

Question ID : 9895808068  
Chosen Option : --

Q.2 From the given options, identify the segment in the sentence which contains the grammatical error.

5

In India, child labour is a socio - economic issue that need urgent attention by everyone.

- Ans
1. that need urgent attention
  2. socio - economic issue
  3. by everyone.
  4. child labour is a

Question ID : 9895808062  
Chosen Option : --

Section : Hindi Language

Q.1 रिक्त स्थान को भरने के लिए उपयुक्त शब्द का चयन करें।

भगवान सबका \_\_\_\_\_ करे।

- Ans
1. भली
  2. भला

3. कृपा

4. दया

Question ID : 9895806847  
Chosen Option : 2

Q.2 निम्नलिखित में से उस विकल्प का चयन करें जो 'एक ही राग अलापना' मुहावरे का अर्थ व्यक्त करता है।

Ans

1. कोई बात एक ही बार कहना
2. कई बात एक साथ कहना
3. सुर में सुर मिलाना
4. एक ही बात बार-बार कहना

Question ID : 9895806859  
Chosen Option : 4

Q.3 दिए गए शब्द का विलोम चुनें।

ऐश्वर्य

Ans

1. शान
2. दरिद्रता
3. शक्ति
4. भक्ति

Question ID : 9895806855  
Chosen Option : 2

Comprehension:

निम्नलिखित गद्यांश के रिक्त स्थानों की पूर्ति गद्यांश के नीचे दिए गए प्रश्नों के अनुसार कीजिए-

होली के पर्व के पीछे एक लोकप्रिय पौराणिक \_\_\_\_\_ (1) है।

हिरण्यकश्यप एक राक्षस राजा था। उसका एक बेटा था जिसका नाम प्रह्लाद था। \_\_\_\_\_ (2) भगवन विष्णु का भक्त था। ये बात उसके पिता को पसंद नहीं थी। पिता के कई बार \_\_\_\_\_ (3) के बाद भी प्रह्लाद ने अपनी विष्णु भक्ति नहीं छोड़ी। हिरण्यकश्यप ने अपने ही बेटे को कई तरह की सजायें दी \_\_\_\_\_ (4) ईश्वर की कृपा से वह हर बार बच जाता था। एक दिन क्रोधित \_\_\_\_\_ (5) हिरण्यकश्यप ने अपनी बहन होलिका को अपने बेटे का वध करने के लिए बुलाया।

SubQuestion No : 4

Q.4 गद्यांश में संकेतित रिक्त स्थान (1) के लिए उपयुक्त शब्द होगा।

Ans

1. कथा
2. दर्शन
3. निबंध

#### 4. कविता

Question ID : 9895806850  
Chosen Option : 1

Comprehension:

निम्नलिखित गद्यांश के रिक्त स्थानों की पूर्ति गद्यांश के नीचे दिए गए प्रश्नों के अनुसार कीजिए-

होली के पर्व के पीछे एक लोकप्रिय पौराणिक \_\_\_\_\_ (1) है।

हिरण्यकश्यप एक राक्षस राजा था। उसका एक बेटा था जिसका नाम प्रह्लाद था। \_\_\_\_\_ (2) भगवन विष्णु का भक्त था। ये बात उसके पिता को पसंद नहीं थी। पिता के कई बार \_\_\_\_\_ (3) के बाद भी प्रह्लाद ने अपनी विष्णु भक्ति नहीं छोड़ी। हिरण्यकश्यप ने अपने ही बेटे को कई तरह की सजायें दी \_\_\_\_\_ (4) ईश्वर की कृपा से वह हर बार बच जाता था। एक दिन क्रोधित \_\_\_\_\_ (5) हिरण्यकश्यप ने अपनी बहन होलिका को अपने बेटे का वध करने के लिए बुलाया।

SubQuestion No : 5

Q.5 गद्यांश में संकेतित रिक्त स्थान (2) के लिए उपयुक्त शब्द होगा।

- Ans  1. वह
2. उसने
3. वे
4. उन्होंने

Question ID : 9895806851  
Chosen Option : 1

Comprehension:

निम्नलिखित गद्यांश के रिक्त स्थानों की पूर्ति गद्यांश के नीचे दिए गए प्रश्नों के अनुसार कीजिए-

होली के पर्व के पीछे एक लोकप्रिय पौराणिक \_\_\_\_\_ (1) है।

हिरण्यकश्यप एक राक्षस राजा था। उसका एक बेटा था जिसका नाम प्रह्लाद था। \_\_\_\_\_ (2) भगवन विष्णु का भक्त था। ये बात उसके पिता को पसंद नहीं थी। पिता के कई बार \_\_\_\_\_ (3) के बाद भी प्रह्लाद ने अपनी विष्णु भक्ति नहीं छोड़ी। हिरण्यकश्यप ने अपने ही बेटे को कई तरह की सजायें दी \_\_\_\_\_ (4) ईश्वर की कृपा से वह हर बार बच जाता था। एक दिन क्रोधित \_\_\_\_\_ (5) हिरण्यकश्यप ने अपनी बहन होलिका को अपने बेटे का वध करने के लिए बुलाया।

SubQuestion No : 6

Q.6 गद्यांश में संकेतित रिक्त स्थान (3) के लिए उपयुक्त शब्द होगा।

- Ans  1. दुलार करने

- ✓ 2. समझाने
- 3. निवेदन करने
- 4. प्यार करने

Question ID : 9895806852  
Chosen Option : 2

Comprehension:

निम्नलिखित गद्यांश के रिक्त स्थानों की पूर्ति गद्यांश के नीचे दिए गए प्रश्नों के अनुसार कीजिए-

होली के पर्व के पीछे एक लोकप्रिय पौराणिक \_\_\_\_\_ (1) है।

हिरण्यकश्यप एक राक्षस राजा था। उसका एक बेटा था जिसका नाम प्रह्लाद था। \_\_\_\_\_ (2) भगवन विष्णु का भक्त था। ये बात उसके पिता को पसंद नहीं थी। पिता के कई बार \_\_\_\_\_ (3) के बाद भी प्रह्लाद ने अपनी विष्णु भक्ति नहीं छोड़ी। हिरण्यकश्यप ने अपने ही बेटे को कई तरह की सजायें दी \_\_\_\_\_ (4) ईश्वर की कृपा से वह हर बार बच जाता था। एक दिन क्रोधित \_\_\_\_\_ (5) हिरण्यकश्यप ने अपनी बहन होलिका को अपने बेटे का वध करने के लिए बुलाया।

SubQuestion No : 7

Q.7 गद्यांश में संकेतित रिक्त स्थान (4) के लिए उपयुक्त शब्द होगा।

- Ans
- 1. इसलिए
  - 2. परन्तु
  - 3. क्योंकि
  - ✗ 4. अतः

Question ID : 9895806853  
Chosen Option : 2

Comprehension:

निम्नलिखित गद्यांश के रिक्त स्थानों की पूर्ति गद्यांश के नीचे दिए गए प्रश्नों के अनुसार कीजिए-

होली के पर्व के पीछे एक लोकप्रिय पौराणिक \_\_\_\_\_ (1) है।

हिरण्यकश्यप एक राक्षस राजा था। उसका एक बेटा था जिसका नाम प्रह्लाद था। \_\_\_\_\_ (2) भगवन विष्णु का भक्त था। ये बात उसके पिता को पसंद नहीं थी। पिता के कई बार \_\_\_\_\_ (3) के बाद भी प्रह्लाद ने अपनी विष्णु भक्ति नहीं छोड़ी। हिरण्यकश्यप ने अपने ही बेटे को कई तरह की सजायें दी \_\_\_\_\_ (4) ईश्वर की कृपा से वह हर बार बच जाता था। एक दिन क्रोधित \_\_\_\_\_ (5) हिरण्यकश्यप ने अपनी बहन होलिका को अपने बेटे का वध करने के लिए बुलाया।

SubQuestion No : 8

Q.8

गद्यांश में संकेतित रिक्त स्थान (5) के लिए उपयुक्त शब्द होगा।

- Ans  1. बनकर  
 2. होकर  
 3. लगकर  
 4. चलकर

Question ID : 9895806854  
Chosen Option : 2

Q.9 दिए गए शब्द के पर्यायवाची शब्द का चयन करें।

विपदा

- Ans  1. आपदा  
 2. निरपराध  
 3. सुख  
 4. मनीषी

Question ID : 9895806858  
Chosen Option : 1

Q.10 दिए गए वाक्य का वह भाग ज्ञात करें जिसमें कोई त्रुटि है।

विद्यालय में पढ़ाई करने के लिए अनेकों छात्र आए हुए थे।

- Ans  1. पढ़ाई करने के लिए  
 2. आए हुए थे।  
 3. विद्यालय में  
 4. अनेकों छात्र

Question ID : 9895806841  
Chosen Option : 4

Q.11 रिक्त स्थान को भरने के लिए उपयुक्त शब्द का चयन करें।

राजा हर्षवर्धन \_\_\_\_\_ करके लौटे।

- Ans  1. नृत्य  
 2. दिग्विजय  
 3. नाटक  
 4. चोरी

Question ID : 9895806846  
Chosen Option : 2

Q.1  
2

दिए गए शब्द के पर्यायवाची शब्द का चयन करें।

तालाब

Ans

1. अरि
2. बाग
3. समुद्र
4. पोखर

Question ID : 9895806857  
Chosen Option : 4

Q.1 3 रिक्त स्थान को भरने के लिए उपयुक्त शब्द का चयन करें।

मैं कलम से चिट्ठी \_\_\_\_\_ रहा हूँ।

Ans

1. सोच
2. भेज
3. पढ़
4. लिख

Question ID : 9895806848  
Chosen Option : 4

Q.1 4 दिए गए वाक्य का वह भाग ज्ञात करें जिसमें कोई त्रुटि है।

मुख्य अतिथि का एक फूल की माला पहना कर स्वागत किया गया।

Ans

1. एक फूल की माला
2. मुख्य अतिथि का
3. पहना कर
4. स्वागत किया गया

Question ID : 9895806839  
Chosen Option : 2

Q.1 5 सही वर्तनी वाले शब्द का चयन करें।

Ans

1. विस्तार
2. वीसतार
3. वीस्तार
4. विसतार

Question ID : 9895806864  
Chosen Option : 1

Q.1 6 दिए गए वाक्य में रेखांकित खंड को प्रतिस्थापित करने के लिए उपयुक्त विकल्प का चयन करें।

धरणी पर बहुत सारी प्राकृतिक घटनाएं होती रहती हैं।

Ans

1. पृथ्वी
2. वृक्ष
3. समूह
4. भुजंग

Question ID : 9895806842  
Chosen Option : 1

Q.1  
7 रिक्त स्थान को भरने के लिए उपयुक्त शब्द का चयन करें।

मनुष्य को अपनी \_\_\_\_\_ नहीं छोड़नी चाहिए।

- Ans  1. बचपन
2. मनुष्यता
  3. अभिमान
  4. क्रोध

Question ID : 9895806845  
Chosen Option : 2

Q.1  
8 दिए गए शब्द का विलोम चुनें।

खरा

- Ans  1. सरल
2. सोना
  3. साफ
  4. खोटा

Question ID : 9895806856  
Chosen Option : 3

Q.1  
9 दिए गए वाक्य का वह भाग ज्ञात करें जिसमें कोई त्रुटि है।

अच्छे आभूषणों के द्वारा शरीर की शोभा बढ़ जाता है ।

- Ans
1. के द्वारा
  2. बढ़ जाता है।
  3. अच्छे आभूषणों
  4. शरीर की शोभा

Question ID : 9895806840  
Chosen Option : 1

Q.2  
0 दिये गये वाक्यांश के लिए एक शब्द दीजिये।

अच्छे चरित्र वाला

- Ans
- 1.

2. व्यभिचारी
3. दुष्चरित्र
4. चरित्रहीन

Question ID : 9895806861  
Chosen Option : 1

Q.2 दिए गए वाक्य में रेखांकित खंड को प्रतिस्थापित करने के लिए उपयुक्त विकल्प का चयन करें।

पुराने समय में कपोत एक बहुत ही अच्छा संदेशक माना जाता था।

Ans

1. कोयल
2. कबूतर
3. डाकिया
- ✗ 4. अश्व

Question ID : 9895806843  
Chosen Option : 2

Q.2 निम्नलिखित में से उस विकल्प का चयन करें जो 'रंगा सियार' मुहावरे का अर्थ व्यक्त करता है।

Ans

- ✗ 1. एक समान
2. धोखे बाज
3. सुंदर सियार
4. रंगा हुआ सियार

Question ID : 9895806860  
Chosen Option : 2

Q.2 दिये गये वाक्यांश के लिए एक शब्द दीजिये।

लेख की नकल

Ans

- ✗ 1. नकलची
2. लिपि
3. प्रतिलिपि
4. हस्तलिपि

Question ID : 9895806862  
Chosen Option : 1

Q.2 दिए गए वाक्य में रेखांकित खंड को प्रतिस्थापित करने के लिए उपयुक्त विकल्प का चयन करें।

कबीर बहुत सी भाषाएँ जानता है।

Ans

- ✓ 1. बहुभाषाविद्
2. भाषावैज्ञानिक
- ✗ 3. बहुज्ञ
- ✗ 4. तत्व चिन्तक



Question ID : 9895806844  
Chosen Option : 1

Q.2  
5 सही वर्तनी वाले शब्द का चयन करें।

Ans

1. अभीषेक
2. अभिषेक
3. अभिशेक
4. अभीशेक

Question ID : 9895806863  
Chosen Option : 2