

Constable (GD) in CAPFs, NIA, SSF and Rifleman (GD) in Assam Rifles Examination, 2018

Roll No. :	
Registration No.	
Name :	
Exam Venue :	
Exam Time :	9:00 AM - 10:30 AM
Exam Date :	05/03/2019

Section : General Section

Q.1 Select the correct option that will fill in the blank and complete the series.

145, 290, 580, 1160, ?

- Ans
- 1. 2320
 - 2. 2310
 - 3. 2215
 - 4. 2420

Question ID : 9895808377

Chosen Option : 1

Q.2

The statements below are followed by four conclusions labeled I, II, III and IV. Assuming that the information in the statements is true, even if it appears to be at variance with generally established facts, decide which conclusion(s) logically and definitely follow(s) from the information given in the statements.

Statements:

All Inductors are Capacitors.

Some Resistors are Inductors.

All Atomic Numbers are Resistors.

Conclusions:

I. All Atomic Numbers are Capacitors.

II. Some Atomic Numbers are Capacitors.

III. Some Capacitors are Resistors.

IV. All Resistors are Capacitors.

- Ans
- 1. Only I and III follow
 - 2. Only III follows
 - 3. Only II follows
 - 4. Only I follows

Question ID : 9895808375

Chosen Option : 2

Q.3 Seven models A, B, C, D, E, F and G – are facing a photographer for a photography session. D is standing to the immediate right of G. B is standing between D and F. A is standing to the immediate right of C. E is standing between G and A.

Who is standing at the center?

- Ans
- 1. A
 - 2. G

3. E

4. D

Question ID : 9895808372
Chosen Option : 2

Q.4 The statements below are followed by two conclusions labeled I and II. Assuming that the information in the statements is true, even if it appears to be at variance with generally established facts, decide which conclusion(s) logically and definitely follow(s) from the information given in the statements.

Statements:

I. Some pens are books.

II. All books are temples.

Conclusions:

I. All temples are pens.

II. Some pens are temples.

Ans 1. Only II follows

2. None follows

3. Only I follows

4. Both I and II follow

Question ID : 9895808376
Chosen Option : 1

Q.5 Select the option that is related to the third term in the same way as the second term is related to the first term.

AC : CF :: MO : ?

Ans 1. PQ

2. OQ

3. OR

4. QR

Question ID : 9895808369
Chosen Option : 3

Q.6 Choose the option figure in which the problem figure is hidden/embedded.

Questions Figure:



Ans 1.

2.

3.

4.

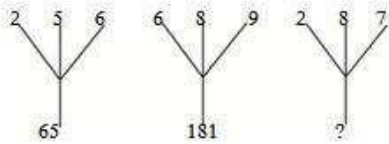
Question ID : 9895808385
Chosen Option : 3

Q.7 There are five books A, B, C, D and E. Book C lies above book D, book E is below A, D is above A, B is below E. Which is at the bottom?

- Ans
- 1. A
 - 2. D
 - 3. B
 - 4. C

Question ID : 9895808374
Chosen Option : 4

Q.8 Find the missing number from the below options.



- Ans
- 1. 108
 - 2. 78
 - 3. 117
 - 4. 110

Question ID : 9895808381
Chosen Option : 3

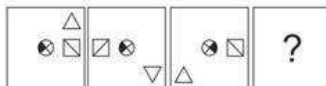
Q.9 Select the correct option that will fill in the blank and complete the series.

YEB, XFD, WGF, ?

- Ans
- 1. UEG
 - 2. VHH
 - 3. DHV
 - 4. VHD

Question ID : 9895808364
Chosen Option : 2

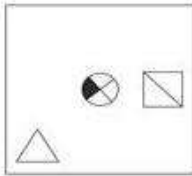
Q.1 Which option has the figure which completes the figure series given in the question?



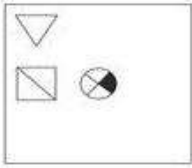
- Ans
- 1.

- 2.

✗ 3.



✗ 4.



Question ID : 9895808383
Chosen Option : 1

Q.1 If a mirror is placed on the northern side then which of the answer figures is the right image of the given question figure.

1



Ans

✓ 1.



✗ 2.



✗ 3.



✗ 4.



Question ID : 9895808386
Chosen Option : 1

Q.1 If PANT is coded as 51, then what will be the code for DOGS?

2

Ans ✓ 1. 45

✗ 2. 52

✗ 3. 49

✗ 4. 44

Question ID : 9895808371
Chosen Option : 1

Q.1 Four options have been given out of which three are alike in some manner, while one is different. Choose the odd one.

3

Ans ✓ 1. 16,21

✗ 2. 10,15

✗ 3. 18,27

✗ 4. 22,33

Question ID : 9895808380

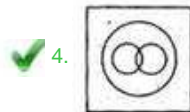
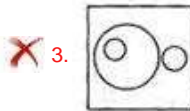
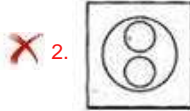
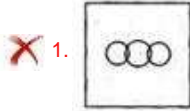
Chosen Option : 1

Q.1 Select the Venn diagram that best illustrates the relationship between the three given classes.

4

Males, Fathers, Brothers

Ans



Question ID : 9895808388
Chosen Option : 4

Q.1 Select the option that is related to the third term in the same way as the second term is related to the first term.

5

412 : 49 :: 361 : ?

Ans

 1. 82 2. 100 3. 120 4. 144

Question ID : 9895808379
Chosen Option : 1

Q.1 Select the option that is related to the third term in the same way as the first term is related to the second term.

6

Car : Garage :: Aeroplane : ?

Ans

 1. Landing 2. Hangar 3. Airhostess 4. Flying

Question ID : 9895808367
Chosen Option : 3

Q.1 A is more intelligent than B. C is not as intelligent as B. D is more intelligent than E but not as good as A. Who is the most intelligent of all?

7

Ans

 1. D 2. A 3. B 4. E

Question ID : 9895808373
Chosen Option : 2

Q.1
8 Select the correct option that will fill in the blank and complete the series.

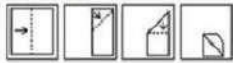
2, 2, 3, 6, 15, ?

- Ans
- 1. 25
 - 2. 35
 - 3. 45
 - 4. 30

Question ID : 9895808378
Chosen Option : 2

Q.1
9 A piece of paper is folded and cut as shown below in the question figures, indicate how it will appear when opened.

Questions Figure:



Ans

- 1.
- 2.
- 3.
- 4.

Question ID : 9895808387
Chosen Option : 4

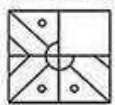
Q.2
0 Four letter clusters have been given out of which three are alike in some manner, while one is different. Choose the odd one.

- Ans
- 1. CDE
 - 2. DEF
 - 3. EFG
 - 4. HIK

Question ID : 9895808365
Chosen Option : 4

Q.2
1 Which of the following answer figure will complete the given figure?

Questions Figure:



Ans

- 1.
- 2.



Question ID : 9895808384
Chosen Option : 2

Q.2 Four words have been given out of which three are alike in some manner, while one is different. Choose the odd one.

2

- Ans 1. SALES
 2. COMIC
 3. TOUCH
 4. SHOES

Question ID : 9895808366
Chosen Option : 1

Q.2 Select the option that is related to the third term in the same way as the first term is related to the second term.

3

Goose : Cackle :: Birds : ?

- Ans 1. Drone
 2. Quack
 3. Chirp
 4. Scream

Question ID : 9895808368
Chosen Option : 2

Q.2 If '+' means 'divided by', '-' means 'added to', 'x' means 'subtracted from' and '÷' means 'multiplied by' then,

4

$20 \times 12 + 4 - 8 \div 4 = ?$

- Ans 1. 39
 2. 41
 3. 49
 4. 38

Question ID : 9895808382
Chosen Option : 3

Q.2 If in a certain code language, CAGE is written as BDFG and NORMAL is written as MOXQDF, how is GENERAL written in that code?

5

- Ans 1. FGMGXDF
 2. MGGFFDX
 3. FGDFXMG
 4. BGIKLMK

Question ID : 9895808370
Chosen Option : 1

Q.2

6

Ans

- 1. Uttama
- 2. Rajadhiraja
- 3. Vijayalaya
- 4. Gandaraditya

Question ID : 9895807450
Chosen Option : 2

Q.2 Which unusual festival/event held in between October and November in Tamil Nadu, has a fire walking ceremony?
7

- Ans
- 1. Thimithi
 - 2. Minjar
 - 3. Puli Kali
 - 4. Madai

Question ID : 9895807429
Chosen Option : 2

Q.2 Which of the following dances is a dance form from Maharashtra?
8

- Ans
- 1. Macha
 - 2. Lezim
 - 3. Chiraw
 - 4. Ottam Thullal

Question ID : 9895807430
Chosen Option : 3

Q.2 Which Act also called the East India Company Act, 1784 was passed by the British Parliament to correct the defects of the Regulating Act of 1773?
9

- Ans
- 1. Regulating Act 1773
 - 2. Government of India Act of 1858
 - 3. Indian Councils Act of 1861
 - 4. Pitt's India Act

Question ID : 9895807441
Chosen Option : 4

Q.3 Which Bharat Ratna recipient's birthday is celebrated as National Doctor's Day?
0

- Ans
- 1. C N R Rao
 - 2. Bidhan Chandra Roy
 - 3. Purushottam Das Tandon
 - 4. Abdul Kalam Azad

Question ID : 9895807433
Chosen Option : 1

Q.3 Government of India Act, 1919 came into effect on 23 December 1919. This act embodied the reforms recommended in the _____ Report.
1

- Ans
- 1. Montague-Chelmsford
 - 2. Curzon

3. National Planning

4. Morley-Minto

Question ID : 9895807451
Chosen Option : 1

Q.3
2 _____ alloy consists of bismuth, lead and tin.

Ans 1. Bell Metal

2. German silver

3. Solder

4. Rose Metal

Question ID : 9895807445
Chosen Option : 2

Q.3
3 Who became the first Indian contestant to win the title of Miss Asia Pacific in 1970?

Ans 1. Reita Faria

2. Tara Fonseca

3. Diana Hayden

4. Zeenat Aman

Question ID : 9895807435
Chosen Option : 2

Q.3
4 Name the highest peak in the Andaman Nicobar islands.

Ans 1. Saddle Peak

2. Karoh Peak

3. Sonsogor

4. Kodachadri

Question ID : 9895807448
Chosen Option : 2

Q.3
5 The formula of Chloroform is _____.

Ans 1. CHCl_3

2. CF_2Cl_2

3. CCl_4

4. CH_3Cl

Question ID : 9895807444
Chosen Option : 2

Q.3
6 In the battle of Amroha (1305) the Delhi Sultanate won a victory over the _____.

Ans 1. Mongol army

2. Bijapur Sultanate

3. East India Company

4. Portuguese Empire

Question ID : 9895807452
Chosen Option : 2

Q.3
7 Minimum Support Price for 2018-19 for Bajra is set at _____.

- Ans
- 1. ₹2,430 per quintal
 - 2. ₹1,750 per quintal
 - 3. ₹1,950 per quintal
 - 4. ₹5,150 per quintal

Question ID : 9895807438
Chosen Option : 2

Q.3
8 The Union Budget 2018 allocated a total corpus of _____ for setting up of a Fishery and Aquaculture fund and an Animal Husbandry fund.

- Ans
- 1. ₹10,000 crore
 - 2. ₹1,000 crore
 - 3. ₹500 crore
 - 4. ₹5,000 crore

Question ID : 9895807437
Chosen Option : 4

Q.3
9 Which part of the constitution of India consists of Articles on Elections?

- Ans
- 1. Part XV
 - 2. Part V
 - 3. Part XX
 - 4. Part X

Question ID : 9895807440
Chosen Option : 3

Q.4
0 The tibia is part of the _____.

- Ans
- 1. skull
 - 2. leg
 - 3. hand
 - 4. arm

Question ID : 9895807446
Chosen Option : 1

Q.4
1 The Black Forest is a large forested mountain range which is found in _____.

- Ans
- 1. Belgium
 - 2. Germany
 - 3. Brazil
 - 4. South Africa

Question ID : 9895807449
Chosen Option : 3

Q.4
2 Siemens is the unit of _____.

- Ans
- 1. magnetic flux
 - 2. electric conductance
 - 3. capacitance
 - 4. magnetic flux density

Question ID : 9895807443
Chosen Option : 3

Q.4
3 Writs and Bicameralism in the Indian constitution are influenced by the constitution of _____.

- Ans
- 1. Australia
 - 2. Ireland
 - 3. United States
 - 4. United Kingdom

Question ID : 9895807439
Chosen Option : 3

Q.4
4 Ludhiana's _____ in May 2018, became the first Indian chess player ever to win the FIDE World Amateur Championship in the under-2300 category.

- Ans
- 1. Krishnan Sasikiran
 - 2. Pentala Harikrishna
 - 3. Baskaran Adhiban
 - 4. Arvinder Preet

Question ID : 9895807432
Chosen Option : 3

Q.4
5 Which of the following options is one of the most popular music forms of Jharkhand?

- Ans
- 1. Dhamsa
 - 2. Khubakeshei
 - 3. Mando
 - 4. Maand

Question ID : 9895807428
Chosen Option : 1

Q.4
6 The Economic Survey report 2017-18 stated that the Industry growth for FY18 was likely to be _____.

- Ans
- 1. 4.90%
 - 2. 4.40%
 - 3. 5.90%
 - 4. 5.40%

Question ID : 9895807436
Chosen Option : 2

Q.4
7 Which team won in the 2018-19 Pro Kabaddi League finals?

- Ans
- 1. Bengaluru Bulls
 - 2. Bengal Warriors
 - 3. Jaipur Pink Panthers
 - 4. Dabang Delhi KC

Question ID : 9895807431

Chosen Option : 1

Q.4
8 Which of the following is an autobiography by former prime minister I K Gujral?

- Ans
- 1. Filling the Gap
 - 2. Matters of Discretion
 - 3. The Autobiography of an Unknown Indian
 - 4. Dreams from my Father

Question ID : 9895807434

Chosen Option : 2

Q.4
9 Aurangabad is situated on the banks of which river?

- Ans
- 1. Musi
 - 2. Godavari
 - 3. Kaum
 - 4. Mahanadi

Question ID : 9895807447

Chosen Option : 2

Q.5
0 The relation between power 'p', current 'I' and resistance 'R' is _____.

- Ans
- 1. $P = I^2 R$
 - 2. $P = I/R^2$
 - 3. $P = IR^2$
 - 4. $P = I^2 R$

Question ID : 9895807442

Chosen Option : 4

Q.5
1 In a library, the ratio of number of story books to that of non-story books was 4:5 and total number of story books was 900. When some more story books were bought, the ratio became 8:9. Find the number of story books bought.

- Ans
- 1. 130
 - 2. 140
 - 3. 120
 - 4. 100

Question ID : 9895807763

Chosen Option : 2

Q.5
2 A family consists of two grandparents, four parents and six grandchildren. The average age of the grandparents is 70 years, that of the parents is 40 years and that of the grandchildren is 12 years. What is the average age of the family?

- Ans
- 1. 32 years
 - 2. 30 years
 - 3. 35 years
 - 4. 31 years

Question ID : 9895807756
Chosen Option : 4

Q.5 On selling 18 balls at ₹900, there is a loss equal to the cost price of 6 balls. The cost price of a ball is:

- Ans
- 1. ₹70
 - 2. ₹75
 - 3. ₹80
 - 4. ₹50

Question ID : 9895807762
Chosen Option : 4

Q.5 Simplify:

$$17 - 4.5 \div 9 + 1.3 \times 0.6 + 0.4$$

- Ans
- 1. 17.68
 - 2. 16.78
 - 3. 17.86
 - 4. 16.68

Question ID : 9895807755
Chosen Option : 1

Q.5 The average monthly income of P and Q is ₹8,500. The average monthly income of Q and R is ₹6,450 and the average monthly income of P and R is ₹7,300. The monthly income of Q is _____.

- Ans
- 1. ₹ 7,650
 - 2. ₹ 7,600
 - 3. ₹ 8,650
 - 4. ₹ 7,000

Question ID : 9895807757
Chosen Option : 2

Q.5 A student multiplied a number by $\frac{4}{5}$ instead of $\frac{5}{4}$, What is the percentage error in the calculation?

- Ans
- 1. 44%
 - 2. 36%
 - 3. 54%
 - 4. 72%

Question ID : 9895807760
Chosen Option : 1

Q.5 If 15 workers can earn ₹1800 in 10 days. Find the earning of 5 workers in 8 days.

Ans

- 1. ₹540
- 2. ₹360
- 3. ₹400
- 4. ₹480

Question ID : 9895807768

Chosen Option : 4

Q.5 The following line graph gives the ratio of the amounts of imports by a company to the amount of exports from that company over the period from 1995 to 2001.

Ratio of Value of Imports to Exports by a Company Over the Years.



If the imports of the company in 1995 was ₹247 crores, the exports from the company in 1995 was?

- Ans
- 1. ₹275 crores
 - 2. ₹380 crores
 - 3. ₹370 crores
 - 4. ₹280 crores

Question ID : 9895807776

Chosen Option : 2

Q.5 Paper charge is ₹55 per kg. How much expenditure would be there to cover a cube of edge 8 m with a paper, if one kg of paper covers 192 sq.m area?

- Ans
- 1. ₹192
 - 2. ₹110
 - 3. ₹55
 - 4. ₹165

Question ID : 9895807774

Chosen Option : 1

Q.6 A vendor bought 10 toffees for a rupee. How many for a rupee must he sell to gain 25%?

- Ans
- 1. 7
 - 2. 8
 - 3. 6
 - 4. 5

Question ID : 9895807761

Chosen Option : 2

Q.6
1

Ans 1.

2. 20

3. 60

4. 70

Question ID : 9895807753

Chosen Option : 4

Q.6
2 There was 25% off on handbags. Madhu bought a handbag. She also got a 10% discount for paying cash. She paid ₹540. What was the price tag on the handbag?

Ans 1. ₹500

2. ₹800

3. ₹450

4. ₹600

Question ID : 9895807758

Chosen Option : 4

Q.6
3 The value of a flat worth ₹7,000,000 is depreciating at the rate of 20% p.a. Then in how many years will the value be reduced to ₹35,84,000.

Ans 1. 5 years

2. 4 years

3. 2 years

4. 3 years

Question ID : 9895807767

Chosen Option : 2

Q.6
4 Simplify:

$$5.7 - 0.4 \text{ of } (7.4 - 2.6) + 5.7 \times 3.01 + 10$$

Ans 1. 30.497

2. 30.397

3. 30.937

4. 30.947

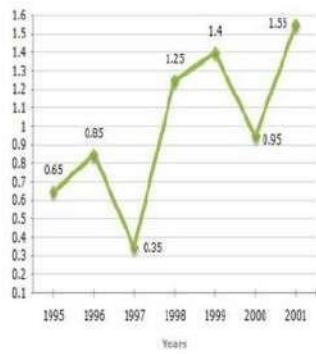
Question ID : 9895807754

Chosen Option : 3

Q.6
5

The following line graph gives the ratio of the amounts of imports by a company to the amount of exports from that company over the period from 1995 to 2001.

Ratio of Value of Imports to Exports by a Company Over the Years.



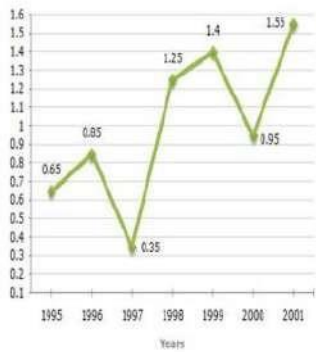
The imports were maximum proportionate to the exports of the company in the year?

- Ans
- 1. 1996
 - 2. 2000
 - 3. 1998
 - 4. 2001

Question ID : 9895807775
Chosen Option : 3

Q.6 The following line graph gives the ratio of the amounts of imports by a company to the amount of exports from that company over the period from 1995 to 2001.

Ratio of Value of Imports to Exports by a Company Over the Years.



In how many of the given years were the exports less than the imports?

- Ans
- 1. 1
 - 2. 4
 - 3. 3
 - 4. 2

Question ID : 9895807777
Chosen Option : 1

Q.6 The mean of a set of seven numbers is 81. If one of the numbers is discarded, the mean of the remaining numbers is 78. The value of discarded number is _____.

- Ans
- 1. 99
 - 2. 98
 - 3. 101
 - 4. 100

Question ID : 9895807759

Chosen Option : 3

Q.6
8 It was intended that ₹780 be divided among P, Q and R in the ratio of 1: 2: 3, but by mistake the distribution was made in the proportion of $\frac{1}{2} : \frac{1}{3} : \frac{1}{4}$. How much does 'Q' lose by the error?

- Ans
- 1. ₹40
 - 2. ₹10
 - 3. ₹30
 - 4. ₹20

Question ID : 9895807765

Chosen Option : 3

Q.6
9 The area of the base of a right circular cone is $\frac{1408}{7} \text{ cm}^2$ and its height is 6 cm. Taking $\pi = \frac{22}{7}$, the curved surface area of the cone is _____

- Ans
- 1. $\frac{7160}{7} \text{ cm}^2$
 - 2. $\frac{1670}{7} \text{ cm}^2$
 - 3. $\frac{1760}{7} \text{ cm}^2$
 - 4. $\frac{1067}{7} \text{ cm}^2$

Question ID : 9895807773

Chosen Option : 3

Q.7
0 Raman paid ₹ 13,300 as interest after 9 years. He had borrowed some money at rate of 6% for first two years, 9% for next three years and 14% for rest of the period. How much money did he borrow?

- Ans
- 1. ₹ 12,000
 - 2. ₹ 10,000
 - 3. ₹ 14,000
 - 4. ₹ 12,500

Question ID : 9895807766

Chosen Option : 4

Q.7
1 Train A takes 6 hours more than train B to cover a distance of 800 km. If the speed of train A is doubled it takes 2 hours less than train B. What is the speed of train B?

- Ans
- 1. 75 km/h
 - 2. 50 km/h
 - 3. 80 km/h
 - 4. 60 km/h

Question ID : 9895807771

Chosen Option : 3

Q.7
2 If 10 men working 6 hours a day can do work in 90 days than 6 men working 15 hours a day can do it in how many days?

- Ans
- 1. 60 days
 - 2. 30 days
 - 3. 40 days

4. 20 days

Question ID : 9895807769

Chosen Option : 1

Q.7 ³ 400 m long train crosses a 300 m long bridge in 70 seconds. Then the speed of the train is _____.

- Ans
- 1. 72 km/h
 - 2. 36 km/h
 - 3. 18 km/h
 - 4. 54 km/h

Question ID : 9895807770

Chosen Option : 2

Q.7 ⁴ A circle with radius 8 cm which has the area equal to the area of triangle with base 8 cm. Then the length of the corresponding altitude of triangle is _____.

- Ans
- 1. 38π cm
 - 2. 18π cm
 - 3. 8π cm
 - 4. 16π cm

Question ID : 9895807772

Chosen Option : 3

Q.7 ⁵ Price of each article of type P, Q, and R is ₹200, ₹300 and ₹400 respectively. Suresh buys articles of each type in the ratio 1:2:3 in ₹2000. How many articles of type Q did he purchase?

- Ans
- 1. 4
 - 2. 2
 - 3. 3
 - 4. 5

Question ID : 9895807764

Chosen Option : 3

Section : English Language

Q.1 Select the most appropriate option to substitute the underlined segment in the given sentence. If there is no need to substitute it, select No improvement.

More than one traveller were injured in the derailling of the train last night.

- Ans
- 1. has injured
 - 2. are injured
 - 3. was injured
 - 4. No improvement

Question ID : 9895808090

Chosen Option : --

Q.2 From the given options, identify the segment in the sentence which contains the grammatical error.

Most major holidays has some connection to the change of seasons everywhere.

- Ans
- 1. seasons everywhere
 - 2. has some connection

3. Most major holidays

4. to the change of

Question ID : 9895808089

Chosen Option : 2

Q.3 Select the most appropriate option to substitute the underlined segment in the given sentence. If there is no need to substitute it, select No improvement.

Some programs make a general purpose computer behave like a virtual terminal.

Ans 1. makes a general purpose computers

2. No improvement

3. makes general purpose computer

4. makes a general purpose computer

Question ID : 9895808092

Chosen Option : 2

Q.4 Select the option that means the same as the given idiom.

To judge a book by its cover.

Ans 1. To go with popular opinions

2. To read the outer cover only

3. To buy books after seeing the colourful cover

4. To rely on outward appearance

Question ID : 9895808105

Chosen Option : 1

Q.5 Select the most appropriate option to fill in the blank.

A Vision is a _____ oriented statement of where you want to be.

Ans 1. future

2. current

3. present

4. trade

Question ID : 9895808093

Chosen Option : 2

Q.6 Select the correctly spelt word.

Ans 1. Dissappointment

2. Disappointment

3. Disappiontment

4. Disapointment

Question ID : 9895808110

Chosen Option : 1

Q.7 Select the most appropriate option to fill in the blank.

Fathers have typically been _____ by how well they support their families financially.

- Ans
- 1. judge
 - 2. judges
 - 3. judged
 - 4. judging

Question ID : 9895808094
Chosen Option : 4

Q.8 Select the word which means the same as the group of words given.

Government not connected with religious or spiritual matters.

- Ans
- 1. Theocratic
 - 2. Secular
 - 3. Democratic
 - 4. Monarchic

Question ID : 9895808107
Chosen Option : 2

Comprehension:

In the following passage some words have been deleted. Fill in the blanks with the help of the alternatives given.

It is very important to realise that an important factor in getting appreciation is often not (1) _____ by the success in academic examinations but your behaviour (2) _____ others. Simplicity and truthfulness play a very important role in social (3) _____. One should always be compassionate and should make an (4) _____ to understand the problems of companions and try to find solutions. We should always be flexible in our (5) _____.

SubQuestion No : 9

Q.9 Select the most appropriate option that will fill in the blank number 1.

- Ans
- 1. spoken
 - 2. driven
 - 3. intended
 - 4. talked

Question ID : 9895808096
Chosen Option : 1

Comprehension:

In the following passage some words have been deleted. Fill in the blanks with the help of the alternatives given.

It is very important to realise that an important factor in getting appreciation is often not (1) _____ by the success in academic examinations but your behaviour (2) _____ others. Simplicity and truthfulness play a very important role in social (3) _____. One should always be compassionate and should make an (4) _____ to understand the problems of companions and try to find solutions. We should always be flexible in our (5) _____.

SubQuestion No : 10

Q.1
0 Select the most appropriate option that will fill in the blank number 2.

- Ans
- 1. towards
 - 2. about
 - 3. on
 - 4. for

Question ID : 9895808097
Chosen Option : 4

Comprehension:

In the following passage some words have been deleted. Fill in the blanks with the help of the alternatives given.

It is very important to realise that an important factor in getting appreciation is often not (1) _____ by the success in academic examinations but your behaviour (2) _____ others. Simplicity and truthfulness play a very important role in social (3) _____. One should always be compassionate and should make an (4) _____ to understand the problems of companions and try to find solutions. We should always be flexible in our (5) _____.

SubQuestion No : 11

Q.1
1 Select the most appropriate option that will fill in the blank number 3.

- Ans
- 1. rejection
 - 2. approval
 - 3. denial
 - 4. perception

Question ID : 9895808098
Chosen Option : 4

Comprehension:

In the following passage some words have been deleted. Fill in the blanks with the help of the alternatives given.

It is very important to realise that an important factor in getting appreciation is often not (1) _____ by the success in academic examinations but your behaviour (2) _____ others. Simplicity and truthfulness play a very important role in social (3) _____. One should always be compassionate and should make an (4) _____ to understand the problems of companions and try to find solutions. We should always be flexible in our (5) _____.

SubQuestion No : 12

Q.1
2 Select the most appropriate option that will fill in the blank number 4.

- Ans
- 1. enquiry
 - 2. attempt
 - 3. association
 - 4. experiment

Question ID : 9895808099
Chosen Option : 1

Comprehension:

In the following passage some words have been deleted. Fill in the blanks with the help of the alternatives given.

It is very important to realise that an important factor in getting appreciation is often not (1) _____ by the success in academic examinations but your behaviour (2) _____ others. Simplicity and truthfulness play a very important role in social (3) _____. One should always be compassionate and should make an (4) _____ to understand the problems of companions and try to find solutions. We should always be flexible in our (5) _____.

SubQuestion No : 13

Q.1
3 Select the most appropriate option that will fill in the blank number 5.

- Ans
- 1. role
 - 2. attitude
 - 3. ambition
 - 4. goal

Question ID : 9895808100
Chosen Option : 2

Q.1
4 From the given options, identify the segment in the sentence which contains the grammatical error.

Ajay says he understood French but cannot speak it as fluently as his parents and grandparents do.

- Ans
- 1. parents and grandparents do
 - 2. he understood French
 - 3. but cannot speak
 - 4. as fluently as

Question ID : 9895808087

Chosen Option : 1

Q.1 Select the most appropriate option to substitute the underlined segment in the given sentence. If there is no need to substitute it, select No improvement.

5 She stayed in Mumbai for two weeks over a project by an NGO working for the welfare of street - children.

- Ans
- 1. No improvement
 - 2. in a project
 - 3. to a project
 - 4. for a project

Question ID : 9895808091

Chosen Option : 1

Q.1 Select the antonym of the given word.

6 SHALLOW

- Ans
- 1. Primary
 - 2. Deep
 - 3. Superficial
 - 4. External

Question ID : 9895808104

Chosen Option : 4

Q.1 From the given options, identify the segment in the sentence which contains the grammatical error.

7

Information suitable for communication, interpretation or processing by a computer are called as Data.

- Ans
- 1. interpretation or processing
 - 2. suitable for communication
 - 3. Information
 - 4. are called as Data

Question ID : 9895808088

Chosen Option : 1

Q.1 Select the most appropriate word to fill in the blank.

8

The year 2018 remained as the best year of _____ and celebrations for him.

- Ans
- 1. provisions
 - 2. milestones
 - 3. symbols
 - 4. mechanisms

Question ID : 9895808111

Chosen Option : 1

Q.1 Select the synonym of the given word.

9

PATRON

Ans

- 1. Beneficiary
- 2. Owner
- 3. Sponsor
- 4. Comrade

Question ID : 9895808101
Chosen Option : 4

Q.2
0 Select the word which means the same as the group of words given.

A sound that cannot be heard.

- Ans
- 1. unrevealed
 - 2. invisible
 - 3. inaudible
 - 4. impalpable

Question ID : 9895808108
Chosen Option : 1

Q.2
1 Select the option that means the same as the given idiom.

To take a stock of.

- Ans
- 1. To go to a stock - room and survey it
 - 2. To save a large quantity of stock
 - 3. To assess and evaluate before taking a decision
 - 4. To collect goods after an inventory

Question ID : 9895808106
Chosen Option : 1

Q.2
2 Select the most appropriate word to fill in the blank.

Social media algorithms can be _____ used in teaching - learning process.

- Ans
- 1. momentarily
 - 2. easily
 - 3. barely
 - 4. briefly

Question ID : 9895808112
Chosen Option : 1

Q.2
3 Select the correctly spelt word.

- Ans
- 1. Constitution
 - 2. Consitution
 - 3. Constitutoin
 - 4. Constitution

Question ID : 9895808109

Chosen Option : 4

Q.2
4 Select the synonym of the given word.

EXHAUSTIVE

- Ans 1. Complete
 2. Temporary
 3. Transitory
 4. Permanent

Question ID : 9895808102
Chosen Option : 2

Q.2
5 Select the antonym of the given word.

COLOSSAL

- Ans 1. Vast
 2. Minimal
 3. Countable
 4. Considerable

Question ID : 9895808103
Chosen Option : 4

Section : Hindi Language

Q.1 निम्नलिखित में से उस विकल्प का चयन करें जो 'मक्खन लगाना' मुहावरे का अर्थ व्यक्त करता है।

- Ans 1. बेकार बैठना
 2. चापलूसी करना
 3. मक्खन लगाकर खाना
 4. कंजूसी करना

Question ID : 9895806885
Chosen Option : --

Q.2 दिए गए वाक्य में रेखांकित खंड को प्रतिस्थापित करने के लिए उपयुक्त विकल्प का चयन करें।

अच्छे कर्म नष्ट नहीं होते हैं-

- Ans 1. नश्वर
 2. अजर
 3. अनश्वर
 4. परस्पर

Question ID : 9895806870
Chosen Option : --

Q.3 दिये गये वाक्यांश के लिए एक शब्द दीजिये।

जिसकी बुद्धि कम हो

Ans

- ✗ 1. दुष्टबुद्धि
 2. मृदुबुद्धि
 3. सुबुद्धि
 4. मंदबुद्धि

Question ID : 9895806888

Chosen Option : --

Q.4 रिक्त स्थान को भरने के लिए उपयुक्त शब्द का चयन करें।

मोहन _____ अर्पिता हँस रहे हैं।

Ans

- ✗ 1. और
 ✗ 2. मानो
 ✗ 3. मगर
 ✓ 4. से

Question ID : 9895806872

Chosen Option : --

Comprehension:

निम्नलिखित गद्यांश के रिक्त स्थानों की पूर्ति गद्यांश के नीचे दिए गए प्रश्नों के अनुसार कीजिए-

दीपावली भारत में _____ (1) जाने वाला सबसे बड़ा त्योहार है। हर साल इस पर्व को कार्तिक _____ (2) में बड़ी धूम-धाम से मनाया जाता है। इस त्योहार के आने के _____ (3) दिन पहले ही इसकी तैयारी आरंभ हो जाती है लोग अपने घरों में साफ़-सफाई और रंग-रोगन का काम _____ (4) कर देते हैं। इस दिन घरों और बाजारों को _____ (5) सजाया जाता है।

SubQuestion No : 5

Q.5 गद्यांश में संकेतित रिक्त स्थान (1) के लिए उपयुक्त शब्द होगा।

Ans

- ✗ 1. मनाया
 ✗ 2. रचाया
 ✗ 3. बनाया
 ✓ 4. मनायी

Question ID : 9895806876

Chosen Option : --

Comprehension:

निम्नलिखित गद्यांश के रिक्त स्थानों की पूर्ति गद्यांश के नीचे दिए गए प्रश्नों के अनुसार कीजिए-

दीपावली भारत में _____ (1) जाने वाला सबसे बड़ा त्योहार है। हर साल इस पर्व को कार्तिक _____ (2) में बड़ी धूम-धाम से मनाया जाता है। इस त्योहार के आने के _____ (3) दिन पहले ही इसकी तैयारी आरंभ हो जाती है लोग अपने घरों में साफ़-सफाई और रंग-रोगन का काम _____ (4) कर देते हैं। इस दिन घरों और बाजारों को _____ (5) सजाया जाता है।

SubQuestion No : 6

Q.6 गद्यांश में संकेतित रिक्त स्थान (2) के लिए उपयुक्त शब्द होगा।

- Ans 1. माह
 2. सप्ताह
 3. दिन
 4. वर्ष

Question ID : 9895806877
 Chosen Option : --

Comprehension:

निम्नलिखित गद्यांश के रिक्त स्थानों की पूर्ति गद्यांश के नीचे दिए गए प्रश्नों के अनुसार कीजिए-

दीपावली भारत में _____ (1) जाने वाला सबसे बड़ा त्योहार है। हर साल इस पर्व को कार्तिक _____ (2) में बड़ी धूम-धाम से मनाया जाता है। इस त्योहार के आने के _____ (3) दिन पहले ही इसकी तैयारी आरंभ हो जाती है लोग अपने घरों में साफ़-सफाई और रंग-रोगन का काम _____ (4) कर देते हैं। इस दिन घरों और बाजारों को _____ (5) सजाया जाता है।

SubQuestion No : 7

Q.7 गद्यांश में संकेतित रिक्त स्थान (3) के लिए उपयुक्त शब्द होगा।

- Ans 1. कुछ
 2. एक
 3. सब
 4. हर

Question ID : 9895806878
 Chosen Option : --

Comprehension:

निम्नलिखित गद्यांश के रिक्त स्थानों की पूर्ति गद्यांश के नीचे दिए गए प्रश्नों के अनुसार कीजिए-

दीपावली भारत में _____ (1) जाने वाला सबसे बड़ा त्योहार है। हर साल इस पर्व को कार्तिक _____ (2) में बड़ी धूम-धाम से मनाया जाता है। इस त्योहार के आने के _____ (3) दिन पहले ही इसकी तैयारी आरंभ हो जाती है लोग अपने घरों में साफ-सफाई और रंग-रोगन का काम _____ (4) कर देते हैं। इस दिन घरों और बाजारों को _____ (5) सजाया जाता है।

SubQuestion No : 8

Q.8 गद्यांश में संकेतित रिक्त स्थान (4) के लिए उपयुक्त शब्द होगा।

- Ans
- 1. खराब
 - 2. समाप्त
 - 3. अच्छा
 - 4. आरंभ

Question ID : 9895806879

Chosen Option : --

Comprehension:

निम्नलिखित गद्यांश के रिक्त स्थानों की पूर्ति गद्यांश के नीचे दिए गए प्रश्नों के अनुसार कीजिए-

दीपावली भारत में _____ (1) जाने वाला सबसे बड़ा त्योहार है। हर साल इस पर्व को कार्तिक _____ (2) में बड़ी धूम-धाम से मनाया जाता है। इस त्योहार के आने के _____ (3) दिन पहले ही इसकी तैयारी आरंभ हो जाती है लोग अपने घरों में साफ-सफाई और रंग-रोगन का काम _____ (4) कर देते हैं। इस दिन घरों और बाजारों को _____ (5) सजाया जाता है।

SubQuestion No : 9

Q.9 गद्यांश में संकेतित रिक्त स्थान (5) के लिए उपयुक्त शब्द होगा।

- Ans
- 1. खराब
 - 2. कम
 - 3. खूब
 - 4. गन्दा

Question ID : 9895806880

Chosen Option : --

Q.1 रिक्त स्थान को भरने के लिए उपयुक्त शब्द का चयन करें।

भूखे को खाने के लिए _____ दो।

- Ans
- 1.

- 2. कपड़ा
- 3. भोजन
- 4. सोना

Question ID : 9895806874
Chosen Option : --

Q.1
1 दिए गए वाक्य का वह भाग ज्ञात करें जिसमें कोई त्रुटि है।

किसी ने ठीक ही कहा है कि जो सोता है वह खोती है।

- Ans
- 1. जो सोता है
 - 2. किसी ने
 - 3. वह खोती है।
 - 4. ठीक ही कहा है कि

Question ID : 9895806866
Chosen Option : --

Q.1
2 दिए गए शब्द का विलोम चुनें।

प्रहार

- Ans
- 1. हमला
 - 2. रक्षा
 - 3. विहार
 - 4. प्रतिरक्षा

Question ID : 9895806881
Chosen Option : --

Q.1
3 दिए गए वाक्य का वह भाग ज्ञात करें जिसमें कोई त्रुटि है।

कुबेर बड़ी ही मतलबी इन्सान है, उसका दिमाग सातवें आसमान पर रहता है।

- Ans
- 1. कुबेर बड़ी ही
 - 2. सातवें आसमान पर रहता है।
 - 3. उसका दिमाग
 - 4. मतलबी इन्सान है,

Question ID : 9895806867
Chosen Option : --

Q.1
4 दिए गए शब्द के पर्यायवाची शब्द का चयन करें।

इंद्र

- Ans
- 1.

2. सुरपति

✓ 3. भागीरथी

✗ 4. सुधाकर

Question ID : 9895806884

Chosen Option : --

Q.1 5 रिक्त स्थान को भरने के लिए उपयुक्त शब्द का चयन करें।

गाय पेड़ _____ बँधी है।

Ans ✓ 1. पर

✗ 2. के

✗ 3. में

✗ 4. से

Question ID : 9895806871

Chosen Option : --

Q.1 6 दिए गए वाक्य का वह भाग ज्ञात करें जिसमें कोई त्रुटि है।

शीर्षक का चयन करते समय अनुच्छेदों का निहित भागों और विचारों की परख कर लेनी चाहिए।

Ans ✗ 1. अनुच्छेदों का निहित भागों

✓ 2. शीर्षक का चयन करते समय

✗ 3. परख कर लेनी चाहिए।

✗ 4. और विचारों की

Question ID : 9895806865

Chosen Option : --

Q.1 7 दिए गए शब्द का विलोम चुनें।

सदाचार

Ans ✗ 1. सुविचार

✗ 2. दुराचार

✓ 3. विचार

4. कुविचार

Question ID : 9895806882

Chosen Option : --

Q.1 8 दिए गए शब्द के पर्यायवाची शब्द का चयन करें।

सतर्कता

Ans ✗ 1. असावधानी

✗ 2. असतर्कता

3. तसल्ली
 4. सावधानी

Question ID : 9895806883
 Chosen Option : --

Q.1
 9 सही वर्तनी वाले शब्द का चयन करें।

- Ans 1. अध्ययन
 2. आध्ययन
 3. अधय्यन
 4. अध्ठ्यन

Question ID : 9895806890
 Chosen Option : --

Q.2
 0 दिये गये वाक्यांश के लिए एक शब्द दीजिये।

जिसमें सहनशक्ति हो

- Ans 1. सहनकारी
 2. सहनीय
 3. सहिष्णु
 4. सहनशीलता

Question ID : 9895806887
 Chosen Option : --

Q.2
 1 रिक्त स्थान को भरने के लिए उपयुक्त शब्द का चयन करें।

_____ कितना सुंदर दृश्य है।

- Ans 1. वाह!
 2. सावधान!
 3. नहीं!
 4. छिः!

Question ID : 9895806873
 Chosen Option : --

Q.2
 2 दिए गए वाक्य में रेखांकित खंड को प्रतिस्थापित करने के लिए उपयुक्त विकल्प का चयन करें।

सूरदास जी जन्म से अंधे थे।

- Ans 1. जन्मांध
 2. मदान्ध
 3. धर्मान्ध
 4. कर्मान्ध

Question ID : 9895806869
 Chosen Option : --

Q.2
3 सही वर्तनी वाले शब्द का चयन करें।

- Ans
- 1. वीशेषण
 - 2. विशेपन
 - 3. विशेषण
 - 4. विसेशण

Question ID : 9895806889

Chosen Option : --

Q.2
4 निम्नलिखित में से उस विकल्प का चयन करें जो 'भैंस के आगे बीन बजाना' मुहावरे का अर्थ व्यक्त करता है।

- Ans
- 1. भैंस के सामने संगीत गाना
 - 2. समझदार के सामने मूर्खता की बातें करना
 - 3. मूर्ख के सामने ज्ञान की बातें करना
 - 4. भैंस को बीन पर नचाना

Question ID : 9895806886

Chosen Option : --

Q.2
5 दिए गए वाक्य में रेखांकित खंड को प्रतिस्थापित करने के लिए उपयुक्त विकल्प का चयन करें।

राम शक्ति के उपासक थे।

- Ans
- 1. शैव
 - 2. शाक्त
 - 3. सदाचारी
 - 4. वैष्णव

Question ID : 9895806868

Chosen Option : --

Constable (GD) in CAPFs, NIA, SSF and Rifleman (GD) in Assam Rifles Examination, 2018

Roll No. :	
Registration No.	
Name :	
Exam Venue :	
Exam Time :	12:30 PM - 2:00 PM
Exam Date :	05/03/2019

Section : General Section

Q.1 Four words have been given out of which three are alike in some manner, while one is different. Choose the odd one.

- Ans
- 1. Truck
 - 2. Trolley
 - 3. Tempo
 - 4. Cargo

Question ID : 9895808391
Chosen Option : 3

Q.2 Choose the option figure in which the problem figure is hidden/embedded.

Questions Figure:



Ans

- 1.
- 2.
- 3.
- 4.

Question ID : 9895808410
Chosen Option : --

Q.3 In a queue, Lily is eighteenth from the front while Mini is sixteenth from the back. If Nisha is twenty- fifth from the front and is exactly in the middle of Lily and Mini, then how many persons are there in the queue?

- Ans
- 1. 46
 - 2. 48

3. 45

4. 47

Question ID : 9895808399
Chosen Option : --

Q.4 Find the missing number from the below options.

72	18
	49
24	17

42	36
	?
29	31

Ans 1. 20

2. 24

3. 18

4. 36

Question ID : 9895808406
Chosen Option : 4

Q.5 Select the correct option that will fill in the blank and complete the series.

Mhz, Ngy, Ofx, Pew, _____

Ans 1. Qrm

2. Rrn

3. Qqn

4. Qdv

Question ID : 9895808389
Chosen Option : 4

Q.6 In a certain code ROHIT is written as "TQJKV", how will COUNTRY be coded?

Ans 1. EQWPVTA

2. EQWVPTE

3. EQWPUTA

4. EQWVPAT

Question ID : 9895808395
Chosen Option : 1

Q.7 Dates of birth of some persons are given below. Find out the date of birth of the oldest person:

A. 12.08.1989

B. 13.09.1991

C. 19.06.1991

D. 20.02.1989

E. 22.03.1991

F. 20.01.1991

G. 20.12.1989

- Ans
- 1. B
 - 2. D
 - 3. C
 - 4. G

Question ID : 9895808398
Chosen Option : 2

Q.8 Select the option that is related to the third term in the same way as the second term is related to the first term.


pRSq : tVWu :: iKLj : ?

- Ans
- 1. MopN
 - 2. mRSq
 - 3. MrsQ
 - 4. mOPn

Question ID : 9895808394
Chosen Option : 1

Q.9 Which of the following answer figure will complete the given figure?

Question figure:

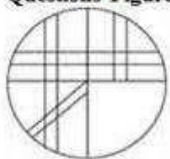


- Ans
- 1.
 - 2.
 - 3.
 - 4.

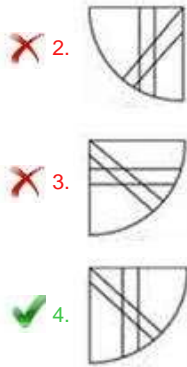
Question ID : 9895808408
Chosen Option : 3

Q.10 Which of the following answer figure will complete the given figure?

Questions Figure:



- Ans
- 1.



Question ID : 9895808409
Chosen Option : 4

Q.1 If 'q' stands for '+', 'y' stands for '-', 'z' stands for '÷' and 'p' stands for 'x', then the value of :

1

20 p 2 q 6 y 5

- Ans 1. 45
2. 35
3. 41
4. 31

Question ID : 9895808407
Chosen Option : 3

Q.1 The statements below are followed by four conclusions labeled I, II, III and IV. Assuming that the information in the statements is true, even if it appears to be at variance with generally established facts, decide which conclusion(s) logically and definitely follow(s) from the information given in the statements.

2

Statements:

- Some Linear Equations are Quadratic Equations.
All Quadratic Equations are Algebraic Equations.

Conclusions:

- I. All Linear Equations are Algebraic Equations.
II. Some Algebraic Equations are Linear Equations.
III. Some Algebraic Equations are Quadratic Equations.
IV. All Quadratic Equations are Linear Equations.

- Ans 1. Only I and II follows.
2. Only II and III follow.
3. Only III follows.
4. Only I follows.

Question ID : 9895808400
Chosen Option : --

Q.1 Choose the odd one out from the given alternatives.

3

- Ans 1. 78 : 4
2. 56 : 4
3. 72 : 6
4. 39 : 3

Question ID : 9895808405
Chosen Option : 1

Q.1
4 If UPSIDE is coded as 74, then SHARKS will be coded as:

- Ans
- 1. 68
 - 2. 72
 - 3. 76
 - 4. 77

Question ID : 9895808396
Chosen Option : 3

Q.1
5 Find the related numbers-pair from the given alternatives.

12 : 156 :: ?

- Ans
- 1. 15 : 340
 - 2. 7 : 50
 - 3. 10 : 101
 - 4. 10 : 110

Question ID : 9895808404
Chosen Option : 4

Q.1
6 If a mirror is placed on MN line, then which of the answer figures will be the right image of the given figure?

Questions Figure:



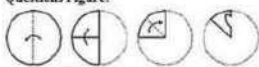
Ans

- 1.
- 2.
- 3.
- 4.

Question ID : 9895808411
Chosen Option : --

Q.1
7 A piece of paper is folded and cut as shown below in the question figures from the given answer figures, indicate the pattern that it will appear when it is opened?

Questions Figure:



Ans

- 1.
- 2.



Question ID : 9895808412
Chosen Option : 4

Q.1 Select the option that is related to the third term in the same way as the second term is related to the first term.

8

Lion : Roar :: Elephant : ?

Ans

1. Trumpet
2. Bray
3. Bark
4. Grunt

Question ID : 9895808392
Chosen Option : 3

Q.1 Select the option that is related to the third term in the same way as the second term is related to the first term.

9

Bees : Hum :: Snakes : ?

Ans

1. Hiss
2. Hoot
3. Roar
4. Talk

Question ID : 9895808393
Chosen Option : 1

Q.2 A, B, C, D, E, F, G and H are sitting around a circle facing at the centre. E, is second to the left of F and third to the right of A. B is third to the right of G who is not an immediate neighbour of E or F. C is second to the right of B. D is to the immediate left of A and third to the left of H.

0

Who is the fifth to the right of C?

Ans

1. H
2. B
3. E
4. G

Question ID : 9895808397
Chosen Option : --

Q.2 Select the correct option that will fill in the blank and complete the series.

1

1331, 121, 2197, 169, 3375, _____

Ans

1. 225
2. 205
3. 216
4. 215

Question ID : 9895808402
Chosen Option : 4

Q.2
2 Select the Venn diagram that best illustrates the relationship between the three given classes.

Girls, Healthy, Trains

Ans



Question ID : 9895808413
Chosen Option : 2

Q.2
3 Four letter clusters have been given out of which three are alike in some manner, while one is different. Choose the odd one.

- Ans ✓ 1. CFJ
✗ 2. DGJ
✗ 3. TWZ
✗ 4. GJM

Question ID : 9895808390
Chosen Option : 1

Q.2
4 Select the correct option that will fill in the blank and complete the series.

37, 26, 39, 24, 41, _____

- Ans ✓ 1. 22
✗ 2. 25
✗ 3. 23
✗ 4. 26

Question ID : 9895808403
Chosen Option : 1

Q.2
5

The statements below are followed by two conclusions labeled I and II. Assuming that the information in the statements is true, even if it appears to be at variance with generally established facts, decide which conclusion(s) logically and definitely follow(s) from the information given in the statements.

Statements:

All rivers are mountains.

All forests are mountains.

Conclusion:

I. Some forests are river.

II. No forest is a river.

- Ans
- 1. Only conclusion I follows
 - 2. Neither conclusion I nor II follows
 - 3. Only conclusion II follows
 - 4. Either conclusion I or II follows

Question ID : 9895808401
Chosen Option : 2

Q.2
6 The Maithon Dam is in which state?

- Ans
- 1. Chhattisgarh
 - 2. Madhya Pradesh
 - 3. Odisha
 - 4. Jharkhand

Question ID : 9895807472
Chosen Option : 4

Q.2
7 Name the class of folk songs of Goa, usually sung to mourn the death of the loved ones.

- Ans
- 1. Gha To Kito
 - 2. Khubakeshei
 - 3. Banvarh
 - 4. Sumangali

Question ID : 9895807453
Chosen Option : 2

Q.2
8 _____ alloy consists of copper and tin.

- Ans
- 1. German silver
 - 2. Bell Metal
 - 3. Solder
 - 4. Rose Metal

Question ID : 9895807470
Chosen Option : 2

Q.2
9 Parliamentary form of government as laid down in the Indian Constitution is influenced by the constitution of _____.

- Ans
- 1. United States
 - 2. United Kingdom
 - 3. Australia

4. Ireland

Question ID : 9895807464
Chosen Option : 3

Q.3
0 Which amendment to the constitution introduced the Goods and Services Tax (GST)?

- Ans
- 1. 103rd Constitution Amendment Act, 2018
 - 2. 73rd Constitution Amendment Act of 2003
 - 3. 92nd Constitution Amendment Act of 2003
 - 4. 101st Constitution Amendment Act, 2016

Question ID : 9895807465
Chosen Option : 1

Q.3
1 Chandragupta I was succeeded by his son _____.

- Ans
- 1. Purugupta
 - 2. Bhanugupta
 - 3. Skandagupta
 - 4. Samudragupta

Question ID : 9895807475
Chosen Option : 4

Q.3
2 Farad is the unit of _____.

- Ans
- 1. electric conductance
 - 2. magnetic flux density
 - 3. capacitance
 - 4. magnetic flux

Question ID : 9895807468
Chosen Option : 3

Q.3
3 Which Indian was crowned Miss World Continental Queen of Beauty—Asia & Oceania in 1999?

- Ans
- 1. Reita Faria
 - 2. Dia Mirza
 - 3. Yukta Mookhey
 - 4. Priyanka Chopra

Question ID : 9895807460
Chosen Option : 4

Q.3
4 The Charter Act of 1833 made the Governor-General of _____ as the Governor-General of India and vested in him all civil and military powers.

- Ans
- 1. Berar Province
 - 2. United Provinces
 - 3. Oudh State
 - 4. Bengal

Question ID : 9895807466
Chosen Option : 4

Q.3
5 The formula of Cyanogen is _____.

- Ans
- 1. CH_3CN
 - 2. CH_2CHCN
 - 3. CH_3OCN
 - 4. C_2N_2

Question ID : 9895807469
Chosen Option : 3

Q.3
6 It was stated in the Union Budget 2018, that the Ujjwala Yojana, the free LPG connection scheme would be expanded to _____ crore women.

- Ans
- 1. eight
 - 2. two
 - 3. four
 - 4. six

Question ID : 9895807462
Chosen Option : 3

Q.3
7 The origin of the sun was approximately how many years before the present age?

- Ans
- 1. 1.5 billion years
 - 2. 2.4 billion years
 - 3. 10.6 billion years
 - 4. 4.6 billion years

Question ID : 9895807474
Chosen Option : 3

Q.3
8 Which of the following is an autobiography by former Minister in charge of External Affairs, Kunwar Natwar Singh?

- Ans
- 1. Where Have I Been?
 - 2. Ace Against Odds
 - 3. Courage and Conviction
 - 4. One Life is not Enough

Question ID : 9895807459
Chosen Option : 3

Q.3
9 Which team won in the 2018 Pro Wrestling League finals?

- Ans
- 1. Punjab Royals
 - 2. Delhi Sultans
 - 3. Haryana Hammers
 - 4. Veer Marathas

Question ID : 9895807456

Q.4 In Battle of Khatoli (1517) Rana Sanga of Mewar defeated Sultan of Delhi, _____ Lodhi and imprisoned him and then released him after collecting ransom.

- Ans
- 1. Qutb-ud-din
 - 2. Sikandar
 - 3. Ibrahim
 - 4. Bahlul Khan

Question ID : 9895807477
Chosen Option : 3

Q.4 The Economic Survey report 2017-18 stated that the Services sector growth for FY18 was likely to be at _____.

- Ans
- 1. 8.30%
 - 2. 6.50%
 - 3. 9.60%
 - 4. 7.10%

Question ID : 9895807461
Chosen Option : 1

Q.4 Which of the following dances is a dance form from Chhattisgarh?

- Ans
- 1. Macha
 - 2. Raut Nacha
 - 3. Chiraw
 - 4. Ottam Thullal

Question ID : 9895807455
Chosen Option : 3

Q.4 Which British retired Civil Service Officer took the initiative to convene the first meeting of the Indian National Union?

- Ans
- 1. John Morley
 - 2. Gilbert Elliot
 - 3. Allan Octavian Hume
 - 4. Edwin Montagu

Question ID : 9895807476
Chosen Option : 2

Q.4 The coccyx is part of the _____.

- Ans
- 1. shoulder girdle
 - 2. spine
 - 3. arm
 - 4. leg

Question ID : 9895807471
Chosen Option : 1

5 Minimum Support Price for 2018-19 for Maize is set at _____.

- Ans
- 1. ₹ 1,950 per quintal
 - 2. ₹ 2,430 per quintal
 - 3. ₹ 1,700 per quintal
 - 4. ₹ 5,150 per quintal

Question ID : 9895807463

Chosen Option : 4

Q.4 The Kila Raipur Rural Olympics is held annually in between January and February near _____.

6

- Ans
- 1. Gwalior
 - 2. Ludhiana
 - 3. Aizwal
 - 4. Vadodara

Question ID : 9895807454

Chosen Option : 3

Q.4 Name the Sanskrit scholar who was awarded the Bharat Ratna?

7

- Ans
- 1. Madan Mohan Malaviya
 - 2. Pandurang Vaman Kane
 - 3. Bidhan Chandra Roy
 - 4. Purushottam Das Tandon

Question ID : 9895807458

Chosen Option : 4

Q.4 India defeated which team to win the Nidahas Trophy 2018 cricket Tri-Series Final played in March 2018?

8

- Ans
- 1. South Africa
 - 2. England
 - 3. Bangladesh
 - 4. West Indies

Question ID : 9895807457

Chosen Option : 3

Q.4 Name the highest peak of the Satpura range.

9

- Ans
- 1. Anamudi
 - 2. Kalsubai
 - 3. Doddabetta
 - 4. Dhupgarh

Question ID : 9895807473

Chosen Option : 1

Q.5 Moment of inertia of a thin rod of mass 'M' and length 'L' about the axis perpendicular to the rod and passing through its centre is _____.

0

- Ans
- 1. $ML^2/6$
 - 2. $ML^2/4$
 - 3. $ML^2/12$
 - 4. $ML^2/2$

Question ID : 9895807467
Chosen Option : 4

Q.5
1 Find the average of $(5 + 5 + \dots)$ upto 200 times and $(8 + 8 + \dots)$ upto 100 times).

- Ans
- 1. 6.5
 - 2. 6
 - 3. 75
 - 4. 7

Question ID : 9895807782
Chosen Option : --

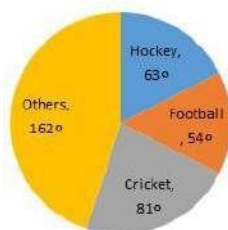
Q.5
2 What should come in place of the question mark (?) in the following question?

$$6 \div 6 \times 9 + 6 - 9 \times 6 - 6 + 6 \times 9 = ?$$

- Ans
- 1. 8
 - 2. 7
 - 3. 9
 - 4. 10

Question ID : 9895807780
Chosen Option : --

Q.5
3 The pie chart given here shows the spendings of a country on various sports during a particular year. Study the chart carefully and answer the questions given below:



What percent of the total spendings is spent on others?

- Ans
- 1. 25%
 - 2. 45%
 - 3. 22.5%
 - 4. 12.5%

Question ID : 9895807800
Chosen Option : --

Q.5
4 A certain sum is divided among p, q and r in a manner that for every rupee that p gets, q gets 75 paise and for every rupee that q gets, r gets 50 paise. If r's share in the total sum is ₹ 36, then find the share of p.

- Ans
- 1.

2. ₹ 54

3. ₹ 96

4. ₹ 72

Question ID : 9895807790

Chosen Option : 2

Q.5 The ratio of length of two trains is 6 : 5 and the ratio of their speed is 3 : 2 The ratio of time taken by them to cross a pole is:

Ans 1. 5 : 6

2. 5 : 8

3. 4 : 5

4. 3 : 5

Question ID : 9895807795

Chosen Option : 3

Q.5 The mode of the data
6 26, 32, 26, 28, 26, 24, 31, 24 is:

Ans 1. 26

2. 24

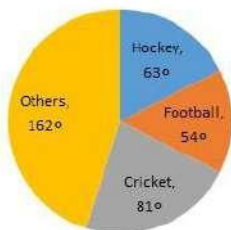
3. 28

4. 31

Question ID : 9895807784

Chosen Option : 1

Q.5 The pie chart given here shows the spendings of a country on various sports during a particular year. Study the chart carefully and answer the questions given below it.



How much percent less is spent on Football than that on Cricket?

Ans 1. $12\frac{1}{2}\%$

2. $20\frac{1}{2}\%$

3. $33\frac{1}{3}\%$

4. 25%

Question ID : 9895807801

Chosen Option : 1

Q.5 An inlet pipe takes 8 hours to fill a tank. An outlet pipe takes 12 hours to empty it. If both pipes are opened simultaneously, in how many hours will the tank be filled?

Ans 1. 12

2. 24

3. 36

4. 8

Question ID : 9895807794
Chosen Option : 1

Q.5 9 Ajay can row his boat in still water, at a speed of 6 kmph. If the speed of the stream is 4 kmph, how long will he take to a distance of 30 km downstream?

Ans 1. 4 hours

2. 3 hours

3. 2 hours

4. 5 hours

Question ID : 9895807796
Chosen Option : 2

Q.6 0 In a class there are a total of 60 boys and girls. Which of the following can't represent the ratio of the number of boys and girls in the class?

Ans 1. 1 : 6

2. 2 : 3

3. 1 : 3

4. 3 : 7

Question ID : 9895807788
Chosen Option : 1

Q.6 1 If the HCF of two numbers is 6 and their LCM is 120, one such pair of numbers is:

Ans 1. 12, 40

2. 18, 40

3. 12, 60

4. 24, 30

Question ID : 9895807778
Chosen Option : 1

Q.6 2 A sum borrowed under compound interest doubles itself in 10 years. When will it become fourfold of itself at the same rate of interest?

Ans 1. 40 years

2. 15 years

3. 24 years

4. 20 years

Question ID : 9895807792
Chosen Option : 4

Q.6 3 If the profit made by a merchant on selling 45 m of cloth is equal to the selling price of 5m of cloth, then his profit percentage is:

Ans 1. 9.09%

2. 11.11%

3. 12.5%

4. 10%

Question ID : 9895807786
Chosen Option : 1

Q.6
4 The average marks of 42 students in an examination, was 64. Later it was found that the marks of three students were misread as 72, 58 and 44 instead of the actual marks 64, 42 and 26 respectively. What is the correct average marks?

- Ans
- 1. 63
 - 2. 62
 - 3. 60
 - 4. 61

Question ID : 9895807781
Chosen Option : 3

Q.6
5 Which of the following is the greatest among all?

- Ans
- 1. 7% discount on marked price ₹500
 - 2. 10% discount on marked price ₹320
 - 3. 12% discount on marked price ₹240
 - 4. 8% discount on marked price ₹400

Question ID : 9895807783
Chosen Option : 1

Q.6
6 Rajaram purchased a certain amount of wheat. If he sold one-fourth of the wheat at a profit of 12%, then the profit percent he needs to make on the remaining wheat to make an overall profit of 15% is:

- Ans
- 1. 20%
 - 2. 16%
 - 3. 18%
 - 4. 15%

Question ID : 9895807787
Chosen Option : 3

Q.6
7 Two parallelogram stand on equal bases and between the same parallel. The ratio of their areas is:

- Ans
- 1. 1 : 3
 - 2. 2 : 1
 - 3. 1 : 1
 - 4. 1 : 2

Question ID : 9895807798
Chosen Option : 2

Q.6
8 If 30 men can do a job in 30 days, find what part of the job can be completed by 1 man in 1 day.

- Ans
- 1. $\frac{1}{90}$
 - 2. $\frac{1}{60}$
 - 3. $\frac{1}{30}$

✓ 4. $\frac{1}{900}$

Question ID : 9895807793
Chosen Option : 3

Q.6
9 Five years ago, the ratio of the ages of a father and his son was 5 : 3. Which of the following cannot be the ratio of their ages 10 years from now?

- Ans
- ✗ 1. 6 : 5
 - ✗ 2. 8 : 7
 - ✓ 3. 7 : 3
 - ✗ 4. 3 : 2

Question ID : 9895807789
Chosen Option : 4

Q.7
0 In what time does money becomes double at simple interest rate of 12% per annum?

- Ans
- ✗ 1. $6\frac{2}{3}$ Years
 - 2. $6\frac{1}{3}$ Years
 - 3. $8\frac{1}{3}$ Years
 - 4. $8\frac{2}{3}$ Years

Question ID : 9895807791
Chosen Option : 3

Q.7
1 If the surface area of two spheres is in the ratio 49 : 25, then the ratio of their volumes will be:

- Ans
- ✓ 1. 343 : 125
 - ✗ 2. 64 : 27
 - ✗ 3. 25 : 49
 - ✗ 4. 343 : 64

Question ID : 9895807797
Chosen Option : 3

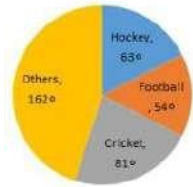
Q.7
2 If the area of the base of a cone is increased then it becomes 1.96 times of original area. If the volume is increased by:

- Ans
- ✗ 1. 40%
 - ✓ 2. 96%
 - ✗ 3. 141%
 - ✗ 4. 100%

Question ID : 9895807799
Chosen Option : 4

Q.7
3

The pie chart given here shows the spendings of a country on various sports during a particular year. Study the graph carefully and answer the questions given below it.



If the total amount spent on sports during the year be ₹18000, the amount spent on Cricket exceeds that on football by (in ₹) :

- Ans
1. 2800
 2. 3000
 3. 2550
 4. 1350

Question ID : 9895807802
Chosen Option : 4

Q.7
4 What should come in place of the question mark (?) in the following question?

$$[(16 \div 4) \times 4] \div 4 = ?$$

- Ans
1. 5
 2. 2
 3. 4
 4. 3

Question ID : 9895807779
Chosen Option : 3

Q.7
5 Sanjay scored 75 out of 150 marks in his mid-term exam and 105 out of 150 in his annual exam. The percentage increase in his marks is:

- Ans
1. 40%
 2. 45%
 3. 30%
 4. 50%

Question ID : 9895807785
Chosen Option : 3

Section : English Language

Q.1 Select the wrongly spelt word.

- Ans
1. Ambition
 2. Auditorum
 3. Absolute
 4. Analysis

Question ID : 9895808135
Chosen Option : 2

Q.2

Select the most appropriate option to substitute the underlined segment in the given sentence. If there is no need to substitute it, select No substitution required.

Modern farming practices is involving the use of fertilizers and pesticides.

Ans

1. involve the use of
2. No substitution required
3. involved the using of
4. has involved the use in

Question ID : 9895808118
Chosen Option : 1

Q.3 Select the most appropriate word to fill in the blank.

Minerals are _____ occurring substances which have certain physical properties.

Ans

1. naturally
2. falsely
3. fictitiously
4. thoroughly

Question ID : 9895808138
Chosen Option : 1

Q.4 Select the meaning of the given idiom.

A piece of cake

Ans

1. A small quantity
2. A very easy task
3. Very tasty
4. Unrealistic hope

Question ID : 9895808131
Chosen Option : 3

Q.5 Select the most appropriate word to fill in the blank.

Biosphere is a narrow zone of the earth where land, water and air _____ with each other to support life.

Ans

1. interact
2. collapse
3. impose
4. surround

Question ID : 9895808137
Chosen Option : 4

Q.6 Select the word which means the same as the group of words given.

That which can be heard

Ans

- 1.

2. Tangible

3. Edible

4. Audible

Question ID : 9895808134

Chosen Option : 4

Q.7 Identify the segment in the sentence which contains the grammatical error from the given options.

If you plant a seed, you will be noticed that it takes some time to grow.

Ans

1. will be noticed

2. takes some

3. to grow

4. If you

Question ID : 9895808113

Chosen Option : 1

Comprehension:

In the following passage some words have been deleted. Fill in the blanks with the help of the alternatives given. Select the most appropriate option for each number.

On the morning of 14 July 1789, (1) _____ city of Paris was in a state of (2) _____. The king had (3) _____ troops to move into the city. Rumors spread that he would soon order the army to (4) _____ fire upon the citizens. Some 7,000 men and women gathered (5) _____ the town hall.

SubQuestion No : 8

Q.8 Select the most appropriate option that will fill in the blank number 1.

Ans 1. the

2. No article needed

3. a

4. an

Question ID : 9895808122

Chosen Option : 1

Comprehension:

In the following passage some words have been deleted. Fill in the blanks with the help of the alternatives given. Select the most appropriate option for each number.

On the morning of 14 July 1789, (1) _____ city of Paris was in a state of (2) _____. The king had (3) _____ troops to move into the city. Rumors spread that he would soon order the army to (4) _____ fire upon the citizens. Some 7,000 men and women gathered (5) _____ the town hall.

SubQuestion No : 9

Q.9

Select the most appropriate option that will fill in the blank number 2.

- Ans
- 1. peace
 - 2. disagreement
 - 3. ease
 - 4. alarm

Question ID : 9895808123

Chosen Option : 1

Comprehension:

In the following passage some words have been deleted. Fill in the blanks with the help of the alternatives given. Select the most appropriate option for each number.

On the morning of 14 July 1789, (1) _____ city of Paris was in a state of (2) _____. The king had (3) _____ troops to move into the city. Rumors spread that he would soon order the army to (4) _____ fire upon the citizens. Some 7,000 men and women gathered (5) _____ the town hall.

SubQuestion No : 10

Q.1
0 Select the most appropriate option that will fill in the blank number 3.

- Ans
- 1. expected
 - 2. urged
 - 3. announced
 - 4. commanded

Question ID : 9895808124

Chosen Option : 3

Comprehension:

In the following passage some words have been deleted. Fill in the blanks with the help of the alternatives given. Select the most appropriate option for each number.

On the morning of 14 July 1789, (1) _____ city of Paris was in a state of (2) _____. The king had (3) _____ troops to move into the city. Rumors spread that he would soon order the army to (4) _____ fire upon the citizens. Some 7,000 men and women gathered (5) _____ the town hall.

SubQuestion No : 11

Q.1
1 Select the most appropriate option that will fill in the blank number 4.

- Ans
- 1. extinguish
 - 2. Spread fire
 - 3. cross
 - 4. open

Question ID : 9895808125

Comprehension:

In the following passage some words have been deleted. Fill in the blanks with the help of the alternatives given. Select the most appropriate option for each number.

On the morning of 14 July 1789, (1) _____ city of Paris was in a state of (2) _____. The king had (3) _____ troops to move into the city. Rumors spread that he would soon order the army to (4) _____ fire upon the citizens. Some 7,000 men and women gathered (5) _____ the town hall.

SubQuestion No : 12

Q.1
2 Select the most appropriate option that will fill in the blank number 5.

- Ans
- 1. across
 - 2. besides
 - 3. on top of
 - 4. in front of

Question ID : 9895808126
Chosen Option : 2

Q.1
3 Identify the segment in the sentence which contains the grammatical error from the given options.

Raw materials are substances that are either found naturally or produce by farmers.

- Ans
- 1. found naturally
 - 2. produce by
 - 3. substances
 - 4. Raw materials

Question ID : 9895808115
Chosen Option : 2

Q.1
4 Select the antonym of the given word.

Rational

- Ans
- 1. Impatient
 - 2. Illogical
 - 3. Conscious
 - 4. Polite

Question ID : 9895808129
Chosen Option : 4

Q.1
5 Select the most appropriate word to fill in the blank.

Most workers _____ as laborers in factories where their wages were fixed.

- Ans
- 1. were employed
 - 2. was employ

3. is employed

4. has employed

Question ID : 9895808120
Chosen Option : 4

Q.1
6 Select the meaning of the given idiom.

Fish out of water

Ans 1. In a new job

2. To be uncomfortable

3. To shift to a new place

4. To be depressed

Question ID : 9895808132
Chosen Option : 4

Q.1
7 Select the synonym of the given word.

Incredible

Ans 1. Unspectacular

2. Ordinary

3. Impossible

4. Unbelievable

Question ID : 9895808128
Chosen Option : 3

Q.1
8 Select the synonym of the given word.

Delight.

Ans 1. Dread

2. Grief

3. Excitement

4. Joy

Question ID : 9895808127
Chosen Option : 4

Q.1
9 Select the wrongly spelt word.

Ans 1. Bileive

2. Biannuual

3. Bracelet

4. Brochure

Question ID : 9895808136
Chosen Option : 1

Q.2

0 Identify the segment in the sentence which contains the grammatical error from the given options.

Scholars have studied the lives of present-day farmer's who practice agriculture.

Ans

1. farmer's
2. the lives of
3. practice agriculture
4. Scholars have

Question ID : 9895808114
Chosen Option : 2

Q.2
1 Select the most appropriate word to fill in the blank.

The French Revolution _____ to the end of monarchy in France.

Ans

1. led
2. is leading
3. was led
4. were leading

Question ID : 9895808119
Chosen Option : 1

Q.2
2 Select the antonym of the given word.

Genuine

Ans

1. Fake
2. Thankful
3. Original
4. Unhealthy

Question ID : 9895808130
Chosen Option : 4

Q.2
3 Select the most appropriate option to substitute the underlined segment in the given sentence. If there is no need to substitute it, select No substitution required.

Tissue is a group of cells that are similar to structure and are organised together.

Ans

1. that are similar in
2. No substitution required
3. that is similarly to
4. that were similarly in

Question ID : 9895808116
Chosen Option : 2

Q.2
4 Select the word which means the same as the group of words given.

Existing, happening, or operating in the air

Ans

- 1.

2. Terrestrial

3. Arboreal

4. Aerial

Question ID : 9895808133
Chosen Option : --

Q.2 Select the most appropriate option to substitute the underlined segment in the given sentence. If there is no need to substitute it, select No substitution required.

The aquatic animals can be breathed under water due to dissolved oxygen.

Ans 1. can be breathing in water

2. could have breathed under water

3. can breathe under water

4. No substitution required

Question ID : 9895808117
Chosen Option : --

Section : Hindi Language

Q.1 सही वर्तनी वाले शब्द का चयन करें।

Ans 1. तोपची

2. तौपची

3. तोपचि

4. तौपचि

Question ID : 9895806916
Chosen Option : --

Q.2 दिए गए शब्द का विलोम चुनें।

आधार

Ans 1. निरपराध

2. मूसलाधार

3. निराधार

4. सूत्रधार

Question ID : 9895806907
Chosen Option : --

Q.3 दिए गए वाक्य का वह भाग ज्ञात करें जिसमें कोई त्रुटि है।

यह मेरा सौभाग्य है कि आप मेरे घर पधारे और आपका दर्शन हुआ।

Ans 1. आप मेरे घर पधारे

2. सौभाग्य है कि

3. और आपका दर्शन हुआ।

✓ 4. यह मेरा

Question ID : 9895806893
Chosen Option : --

Q.4 दिए गए शब्द के पर्यायवाची शब्द का चयन करें।

न्यून

- Ans
- ✗ 1. पर्याप्त
 - ✗ 2. कोण
 - ✗ 3. अधिक
 - ✓ 4. कम

Question ID : 9895806909
Chosen Option : --

Q.5 दिए गए वाक्य का वह भाग ज्ञात करें जिसमें कोई त्रुटि है।

ग्रीष्म ऋतु आते ही अनाज खरीदने की व्यवस्था किया जाता है।

- Ans
- ✗ 1. की व्यवस्था
 - 2. किया जाता है।
 - 3. ग्रीष्म ऋतु आते ही
 - ✗ 4. अनाज खरीदने

Question ID : 9895806892
Chosen Option : --

Q.6 दिए गए वाक्य में रेखांकित खंड को प्रतिस्थापित करने के लिए उपयुक्त विकल्प का चयन करें।

विजय ने अजय का बहुत तिरस्कार किया।

- Ans
- ✗ 1. विश्वास
 - ✓ 2. अपमान
 - ✗ 3. सम्मान
 - ✗ 4. विरोध

Question ID : 9895806895
Chosen Option : --

Q.7 दिये गये वाक्यांश के लिए एक शब्द दीजिये।

दोपहर से पहले का समय

- Ans
- ✗ 1. पूर्वाह्न
 - ✗ 2. सायंकाल
 - ✗ 3. मध्याह्न
 - ✓ 4. अपराह्न

Question ID : 9895806914
Chosen Option : --

Q.8 रिक्त स्थान को भरने के लिए उपयुक्त शब्द का चयन करें।

सफेद रंग _____ का प्रतीक है।

- Ans
- 1. आतंकवाद
 - 2. असत्य
 - 3. हिंसा
 - 4. शांति

Question ID : 9895806898
Chosen Option : --

Q.9 सही वर्तनी वाले शब्द का चयन करें।

- Ans
- 1. नाशमझी
 - 2. नासमजी
 - 3. नासमझी
 - 4. नसमझी

Question ID : 9895806915
Chosen Option : --

Q.10 दिए गए वाक्य में रेखांकित खंड को प्रतिस्थापित करने के लिए उपयुक्त विकल्प का चयन करें।

लक्ष्मण, राम को अपना भाता मानता है।

- Ans
- 1. शत्रु
 - 2. आदर्श
 - 3. मित्र
 - 4. भाई

Question ID : 9895806896
Chosen Option : --

Q.11 दिए गए वाक्य में रेखांकित खंड को प्रतिस्थापित करने के लिए उपयुक्त विकल्प का चयन करें।

तालिका में उनके प्रकार के फूलों का वर्णन किया गया है।

- Ans
- 1. चित्र
 - 2. पंक्ति
 - 3. पत्र
 - 4. सारणी

Question ID : 9895806894
Chosen Option : --

Q.12 निम्नलिखित में से उस विकल्प का चयन करें जो 'मक्खियाँ मारना' मुहावरे का अर्थ व्यक्त करता है।

- Ans
- 1.

2. काम में लगे रहना

✓ 3. बेकार बैठना

✗ 4. मक्खियों को मारना

Question ID : 9895806911

Chosen Option : --

Q.1
3 दिये गये वाक्यांश के लिए एक शब्द दीजिये।

विज्ञान से संबंध रखने वाला

Ans ✗ 1. ज्ञानी

✗ 2. अल्पज्ञानी

✗ 3. वैज्ञानिक

✓ 4. आविष्कार

Question ID : 9895806913

Chosen Option : --

Comprehension:

निम्नलिखित गद्यांश के रिक्त स्थानों की पूर्ति गद्यांश के नीचे दिए गए प्रश्नों के अनुसार कीजिए-

डिजिटल इंडिया एक ऐसा प्रोजेक्ट है जिसका _____ (1) भारत को एक बेहतर राष्ट्र बनाना है। ये _____ (2) देश के जाने माने उद्योगपतियों की मौजूदगी में 1 जुलाई 2015 को इंदिरा गाँधी इंडोर स्टेडियम में शुरू किया गया। 2019 तक इसके पूरा होने की _____ (3) है। डिजिटल इंडिया का विज्ञान तीन प्रमुख क्षेत्रों पर _____ (4) है। ये हैं- डिजिटल ढांचा, मांग पर संचालन एवं सेवाएं और _____ (5) का डिजिटल सशक्तीकरण।

SubQuestion No : 14

Q.1
4 गद्यांश में संकेतित रिक्त स्थान (1) के लिए उपयुक्त शब्द होगा।

Ans ✗ 1. साधन

✗ 2. इच्छा

✓ 3. लक्ष्य

✗ 4. अभिलाषा

Question ID : 9895806902

Chosen Option : --

Comprehension:

निम्नलिखित गद्यांश के रिक्त स्थानों की पूर्ति गद्यांश के नीचे दिए गए प्रश्नों के अनुसार कीजिए-

डिजिटल इंडिया एक ऐसा प्रोजेक्ट है जिसका _____ (1) भारत को एक बेहतर राष्ट्र बनाना है। ये _____ (2) देश के जाने माने उद्योगपतियों की मौजूदगी में 1 जुलाई 2015 को इंदिरा गाँधी इंडोर स्टेडियम में शुरू किया गया। 2019 तक इसके पूरा होने की _____ (3) है। डिजिटल इंडिया का विज़न तीन प्रमुख क्षेत्रों पर _____ (4) है। ये हैं- डिजिटल ढांचा, मांग पर संचालन एवं सेवाएं और _____ (5) का डिजिटल सशक्तीकरण।

SubQuestion No : 15

Q.1
5 गद्यांश में संकेतित रिक्त स्थान (2) के लिए उपयुक्त शब्द होगा।

- Ans
- 1. महायान
 - 2. अभियान
 - 3. वायुयान
 - 4. हीनयान

Question ID : 9895806903

Chosen Option : --

Comprehension:

निम्नलिखित गद्यांश के रिक्त स्थानों की पूर्ति गद्यांश के नीचे दिए गए प्रश्नों के अनुसार कीजिए-

डिजिटल इंडिया एक ऐसा प्रोजेक्ट है जिसका _____ (1) भारत को एक बेहतर राष्ट्र बनाना है। ये _____ (2) देश के जाने माने उद्योगपतियों की मौजूदगी में 1 जुलाई 2015 को इंदिरा गाँधी इंडोर स्टेडियम में शुरू किया गया। 2019 तक इसके पूरा होने की _____ (3) है। डिजिटल इंडिया का विज़न तीन प्रमुख क्षेत्रों पर _____ (4) है। ये हैं- डिजिटल ढांचा, मांग पर संचालन एवं सेवाएं और _____ (5) का डिजिटल सशक्तीकरण।

SubQuestion No : 16

Q.1
6 गद्यांश में संकेतित रिक्त स्थान (3) के लिए उपयुक्त शब्द होगा।

- Ans
- 1. निर्देश
 - 2. उम्मीद
 - 3. निवेदन
 - 4. आदेश

Question ID : 9895806904

Chosen Option : --

Comprehension:

निम्नलिखित गद्यांश के रिक्त स्थानों की पूर्ति गद्यांश के नीचे दिए गए प्रश्नों के अनुसार कीजिए-

डिजिटल इंडिया एक ऐसा प्रोजेक्ट है जिसका _____ (1) भारत को एक बेहतर राष्ट्र बनाना है। ये _____ (2) देश के जाने माने उद्योगपतियों की मौजूदगी में 1 जुलाई 2015 को इंदिरा गाँधी इंडोर स्टेडियम में शुरू किया गया। 2019 तक इसके पूरा होने की _____ (3) है। डिजिटल इंडिया का विज़न तीन प्रमुख क्षेत्रों पर _____ (4) है। ये हैं- डिजिटल ढांचा, मांग पर संचालन एवं सेवाएं और _____ (5) का डिजिटल सशक्तीकरण।

SubQuestion No : 17

Q.1
7 गद्यांश में संकेतित रिक्त स्थान (4) के लिए उपयुक्त शब्द होगा।

- Ans
- 1. लिखित
 - 2. पठित
 - 3. सूचित
 - 4. केन्द्रित

Question ID : 9895806905
Chosen Option : --

Comprehension:

निम्नलिखित गद्यांश के रिक्त स्थानों की पूर्ति गद्यांश के नीचे दिए गए प्रश्नों के अनुसार कीजिए-

डिजिटल इंडिया एक ऐसा प्रोजेक्ट है जिसका _____ (1) भारत को एक बेहतर राष्ट्र बनाना है। ये _____ (2) देश के जाने माने उद्योगपतियों की मौजूदगी में 1 जुलाई 2015 को इंदिरा गाँधी इंडोर स्टेडियम में शुरू किया गया। 2019 तक इसके पूरा होने की _____ (3) है। डिजिटल इंडिया का विज़न तीन प्रमुख क्षेत्रों पर _____ (4) है। ये हैं- डिजिटल ढांचा, मांग पर संचालन एवं सेवाएं और _____ (5) का डिजिटल सशक्तीकरण।

SubQuestion No : 18

Q.1
8 गद्यांश में संकेतित रिक्त स्थान (5) के लिए उपयुक्त शब्द होगा।

- Ans
- 1. सामान्य वस्तु
 - 2. कलकारखानों
 - 3. नागरिकों
 - 4. लघु उद्योग

Question ID : 9895806906
Chosen Option : --

9 निम्नलिखित में से उस विकल्प का चयन करें जो 'गंगा नहाना' मुहावरे का अर्थ व्यक्त करता है।

Ans

1. धार्मिक हो जाना
2. तीर्थ यात्रा करना
3. खूब मेहनत करना
4. कठिन कार्य पूरा होना

Question ID : 9895806912

Chosen Option : --

Q.2
0 रिक्त स्थान को भरने के लिए उपयुक्त शब्द का चयन करें।

राम आजकल घर _____ से आता है।

Ans

1. जोर
2. दौड़
3. तेज
4. देर

Question ID : 9895806900

Chosen Option : --

Q.2
1 रिक्त स्थान को भरने के लिए उपयुक्त शब्द का चयन करें।

अतिथि का फूलों की _____ से स्वागत किया गया।

Ans

1. माला
2. गड़डी
3. टुकड़ी
4. गुच्छा

Question ID : 9895806897

Chosen Option : --

Q.2
2 दिए गए वाक्य का वह भाग ज्ञात करें जिसमें कोई त्रुटि है।

सूरजकुंड से प्रतिवर्ष बड़ा मेला लगता है।

Ans

1. लगता है।
2. सूरजकुंड से
3. बड़ा मेला
4. प्रतिवर्ष

Question ID : 9895806891

Chosen Option : --

Q.2
3

दिए गए शब्द का विलोम चुनें।

साध्य

Ans

1. असाध्य
2. रोगी
3. संध्या
4. वैद्य

Question ID : 9895806908

Chosen Option : --

Q.2

4 रिक्त स्थान को भरने के लिए उपयुक्त शब्द का चयन करें।

वह खाना _____ चुका है।

Ans

1. कर
2. ठूस
3. खा
4. चुग

Question ID : 9895806899

Chosen Option : --

Q.2

5 दिए गए शब्द के पर्यायवाची शब्द का चयन करें।

पार्वती

Ans

1. प्रभा
2. आभा
3. विभा
4. गौरी

Question ID : 9895806910

Chosen Option : --

Constable (GD) in CAPFs, NIA, SSF and Rifleman (GD) in Assam Rifles Examination, 2018

Roll No. :	
Registration No.	
Name :	
Exam Venue :	
Exam Time :	4:00 PM - 5:30 PM
Exam Date :	05/03/2019

Section : General Section

Q.1 Raman earns more than Fakir but not as much as Zaheer. Kisan earns less than Zaheer but not as less as Raman. Lokesh earns more than Fakir but not as much as Raman. Who amongst them will be in the middle if they are ranked based on their earnings?

- Ans
- 1. Kisan
 - 2. Fakir
 - 3. Lokesh
 - 4. Raman

Question ID : 9895808424
Chosen Option : 4

Q.2 Select the correct option that will fill in the blank and complete the series.

- 41, 46, 56, 73, 99, 136, _____
- Ans
- 1. 186
 - 2. 176
 - 3. 177
 - 4. 166

Question ID : 9895808428
Chosen Option : 1

Q.3 Four boys A, B, C, D and four girls P, Q, R, S are playing merry go round in such a way that they face the centre and form a circle. No two girls or no two boys are next to each other. A is to the immediate left of R, who is opposite to Q. P and Q have only C between them. P is opposite to S, who is to the immediate right of B.

- Which of the following is an acceptable arrangement of the players in clockwise direction?
- Ans
- 1. Q, C, P, D, R, A, S, B
 - 2. A, R, D, P, C, Q, B, S
 - 3. D, R, A, S, B, Q, P, C
 - 4. C, Q, P, D, S, B, A, R

Question ID : 9895808423
Chosen Option : 2

Q.4 Choose the option that most closely resembles the mirror image of the given figure when mirror is placed at right side.

Question figure:

G.T.

Ans

1. .T.T.

2. T..T

3. .T.T.

4. .T.T.

Question ID : 9895808436

Chosen Option : 4

Q.5 In a certain code, BIRLA is coded as DLVQG, then how is TECH coded in the same way?

Ans 1. VGHM

2. VHGM

3. HVMG

4. VHMG

Question ID : 9895808420

Chosen Option : 2

Q.6 Four letter clusters have been given out of which three are alike in some manner, while one is different. Choose the odd one.

Ans 1. IoK mLp

2. vQuRtS

3. tOsPrQ

4. hCgDfE

Question ID : 9895808415

Chosen Option : 1

Q.7 Select the option that is related to the third term in the same way as the second term is related to the first term.

4 : 8 :: 6 : ?

Ans 1. 22

2. 18

3. 24

4. 16

Question ID : 9895808429

Chosen Option : 4

Q.8 The statements below are followed by three conclusions labeled I, II and III. Assuming that the information in the statements is true, even if it appears to be at variance with generally established facts, decide which conclusion(s) logically and definitely follow(s) from the information given in the statements.

Statements:

No train is star.

Some stars are men.

Conclusions:

I. Some men are trains.

II. No man is train.

III. All men are stars.

Ans

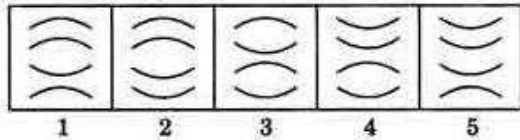
1. Only I follows
2. Either II or III follows
3. Only III follows
4. Either I or II follows

Question ID : 9895808425

Chosen Option : 2

Q.9 Choose the option which completes the given figure series

Question Figures:



Ans

- ✓ 1.
- ✗ 2.
- ✗ 3.
- ✗ 4.

Question ID : 9895808433

Chosen Option : 1

Q.10 Select the related word pair from the given alternatives.

slither : snake :: _____ : _____

- ✗ 1. Sloths : Swim
- ✗ 2. Crawl : Rabbit
- ✓ 3. Fly : Bird
- ✗ 4. Diving : Fishes

Question ID : 9895808418

Chosen Option : 3

Q.11 Select the correct option that will fill in the blank and complete the series.

EEVV, AHZS, WKDP, _____

- ✓ 1. SNHM
- ✗ 2. _____
- ✗ 3. RUIE

X 4. SMHN

Question ID : 9895808414
Chosen Option : 1

Q.1 The statements below are followed by two conclusions labeled I and II. Assuming that the information in the statements is true, even if it appears to be at variance with generally established facts, decide which conclusion(s) logically and definitely follow(s) from the information given in the statements.

Statements:

Some clocks are tiles

Some tiles are walls.

Conclusions:

I. Some walls are tiles.

II. Some clocks are walls.

- Ans**
1. Only conclusion II follows
 2. Either I or II follows
 3. Only conclusion I follows
 4. Neither I nor II follows

Question ID : 9895808426
Chosen Option : 1

Q.1 Choose the option figure in which the problem figure is hidden/embedded.

Question Figures:

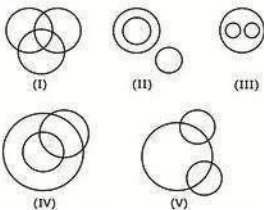


- Ans**
- X** 1.
 - X** 2.
 - ✓** 3.
 - X** 4.

Question ID : 9895808435
Chosen Option : 4

Q.1 Select the Venn diagram that best illustrates the relationship between the three given classes.

Bricks, House, Bridge



- Ans 1. (I)
 2. (V)
 3. (III)
 4. (II) & (IV) both

Question ID : 9895808438
 Chosen Option : 1

Q.1 Select the correct combination of mathematical signs to replace '**' signs and to balance the given equation:
 5

$$240 * 40 * 8 * 60 * 185$$

- Ans 1. $\div \times + =$
 2. $+ \div - =$
 3. $+ + \times =$
 4. $- + \div =$

Question ID : 9895808432
 Chosen Option : 2

Q.1 Select the correct option that will fill in the blank and complete the series.
 6

21, 57, 32, 48, 39, _____

- Ans 1. 55
 2. 43
 3. 45
 4. 54

Question ID : 9895808427
 Chosen Option : 4

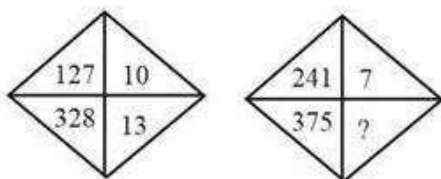
Q.1 Select the option that is related to the third term in the same way as the second term is related to the first term.
 7

BVWKS : 72 :: PKOM : ?

- Ans 1. 16
 2. 46
 3. 23
 4. 51

Question ID : 9895808419
 Chosen Option : 2

Q.1 Find the missing number from the below options.
 8

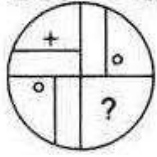


- Ans 1. 16
 2. 15
 3. 11
 4. 14

Question ID : 9895808431
Chosen Option : 3

Q.1
9 Which of the following answer figure will complete the given figure?

Question Figures:



Ans

- ✓ 1.
- ✗ 2.
- ✗ 3.
- ✗ 4.

Question ID : 9895808434
Chosen Option : 1

Q.2
0 Select the related word pair from the given alternatives.

Protector : Angle :: _____ : _____

- Ans ✓ 1. Scale : Length
- ✗ 2. radius : square
- ✗ 3. Compass : temperature
- ✗ 4. Map : Weather

Question ID : 9895808417
Chosen Option : 1

Q.2
1 A, M, P, D, Q, R, W and B are sitting around a circle facing at the centre. D is fourth to the left of A who is third to the right of M. P is third to the left of Q who is third to the left of M. R is third to the right of W who is second to the right of B.

Who is second to the left of D?

- Ans 1. W
2. B
3. Data inadequate
4. Q

Question ID : 9895808422
Chosen Option : 2

Q.2
2

A square transparent sheet with a pattern is given. Find out amongst the four alternatives as to how the pattern will appear when the transparent sheet is folded at the dotted line.

Question Figures:



Ans

1.



2.



3.



4.



Question ID : 9895808437
Chosen Option : 3

Q.2 In a certain code, CORRUPT is coded as 7033146, And CHAMP as 75284, then how is PRMUTR coded in the same way?

Ans 1. 438163

2. 438363

3. 438631

4. 438136

Question ID : 9895808421
Chosen Option : 1

Q.2 Four words have been given out of which three are alike in some manner, while one is different. Choose the odd one.

Ans 1. Subtraction

2. Addition

3. Profit

4. Multiplication

Question ID : 9895808416
Chosen Option : 3

Q.2 Four options have been given out of which three are alike in some manner, while one is different. Choose the odd one.

Ans 1. 57

2. 47

3. 79

4. 59

Question ID : 9895808430
Chosen Option : 3

Q.2 Dwarf planet _____ is the largest object in the asteroid belt.

Ans 1.

- 2. Europa
- 3. Triton
- 4. Titan

Question ID : 9895807499
Chosen Option : 4

Q.2 Finance Minister Arun Jaitley announced in the 2018 Budget that the Public Sector Banks are to raise _____ by issuing
7 bonds, which are part of the ₹ 2.11 lakh crore package.

- Ans
- 1. ₹ 60,000 crore
 - 2. ₹ 20,000 crore
 - 3. ₹ 80,000 crore
 - 4. ₹ 40,000 crore

Question ID : 9895807487
Chosen Option : 1

Q.2 Which element is placed in the 6th Period and IIA Group of the periodic table?
8

- Ans
- 1. Barium (At no 56)
 - 2. Lead (At no 82)
 - 3. Strontium (At no 38)
 - 4. Tellurium (At no 52)

Question ID : 9895807494
Chosen Option : 2

Q.2 The prefix ' _____ ' is equal to a factor of 10^{-15} .
9

- Ans
- 1. atto
 - 2. femto
 - 3. peta
 - 4. exa

Question ID : 9895807493
Chosen Option : 3

Q.3 Rhombic sulphur is crystalline in nature and is _____ in shape.
0

- Ans
- 1. tetrahedron
 - 2. dodecahedron
 - 3. square pyramid
 - 4. octahedron

Question ID : 9895807495
Chosen Option : 2

Q.3 The Constitution (Eighty-sixth Amendment) Act, 2002 inserted Article 21-A in the Constitution of India _____.
1

- Ans
- 1. To reduce the voting age from 21 years to 18 years.
 - 2. To provide Free and compulsory education to children between 6 and 14 years.

3. For the introduction of Panchayati Raj
4. For the introduction of Nagarpalikas and Municipalities.

Question ID : 9895807490
Chosen Option : 1

Q.3 Name the Adilshahi general who was killed by Shivaji and his soldiers after their meeting at the foot of the Pratapgad fort?

- Ans 1. Afzal Khan
2. Dilir Khan
3. Adham Khan
4. Kartalab Khan

Question ID : 9895807502
Chosen Option : 4

Q.3 India was defeated by the cricket team from which country in the final of the 2018 Women's Twenty 20 Asia Cup?

- Ans 1. England
2. Australia
3. Bangladesh
4. Pakistan

Question ID : 9895807482
Chosen Option : 1

Q.3 Who wrote the book "Small is Beautiful"?

- Ans 1. Margaret Atwood
2. Stephen King
3. J.R.R Tolkien
4. E. F. Schumacher

Question ID : 9895807485
Chosen Option : 3

Q.3 Minimum Support Price for 2018-19 season (to be marketed in 2019-20) for _____ is set at ₹ 1,840 per quintal.

- Ans 1. Gram
2. Masur (Lentil)
3. Barley
4. Wheat

Question ID : 9895807488
Chosen Option : 3

Q.3 Which of the following is NOT a bridge across the Brahmaputra?

- Ans 1. Kolia Bhomura Setu
2. Naranarayan Setu
3. Bogibeel

4. Mahatma Gandhi Setu

Question ID : 9895807497
Chosen Option : 3

Q.3 The _____ muscle runs from the lower leg bones (the tibia and fibula) to the heel (the calcaneus).
7

- Ans 1. Masseter
 2. Pectoralis major
 3. Soleus
 4. Achilles tendon

Question ID : 9895807496
Chosen Option : 2

Q.3 Gangaur is an important festival of which state?
8

- Ans 1. Sikkim
 2. Madhya Pradesh
 3. Punjab
 4. Rajasthan

Question ID : 9895807480
Chosen Option : 3

Q.3 Name the Dadasaheb Phalke Award recipient who was better known by her stage name Sulochana.
9

- Ans 1. Anne Bancroft
 2. Ruby Myers
 3. Bette Davis
 4. Anna Magnani

Question ID : 9895807483
Chosen Option : 4

Q.4 After the reduction of GST on some items effective from 1 January 2019, which item is still in the 28% slab?
0

- Ans 1. digital cameras
 2. video game consoles
 3. TVs smaller than 32 inches
 4. Cement

Question ID : 9895807486
Chosen Option : 2

Q.4 The relation between the Energy 'E' stored in a capacitor of capacitance 'C' and 'V' the potential difference across the capacitor is _____.
1

- Ans 1. $E/2=VC^2$
 2. $2E=CV^2$
 3. $E/2=CV^2$
 4. $2E=VC^2$

Question ID : 9895807492
Chosen Option : 1

Q.4 Name the harvesting festival in Mizoram that is held in between August and September, after the harvest of maize.

2

- Ans
- 1. Sume-Gelirak
 - 2. Bija Pandu
 - 3. Sekrenyi
 - 4. Mim Kut

Question ID : 9895807479
Chosen Option : 4

Q.4 Name the only river in the Thar desert.

3

- Ans
- 1. Gomai
 - 2. Luni
 - 3. Nira
 - 4. Varada

Question ID : 9895807498
Chosen Option : 1

Q.4 Monr is another name for which Indian language?

4

- Ans
- 1. Kui
 - 2. Korku
 - 3. Angami
 - 4. Halabi

Question ID : 9895807478
Chosen Option : 3

Q.4 Bhagat Singh was hanged for which revolutionary act?

5

- Ans
- 1. For throwing a bomb in the Delhi Central Assembly house
 - 2. For raiding the Chittagong Armoury
 - 3. For the shooting of British officer Jackson
 - 4. For the Kakori Train robbery

Question ID : 9895807501
Chosen Option : 1

Q.4 Who is the author of the, 'Sacred Games'?

6

- Ans
- 1. Nirad C Chaudhuri
 - 2. Arvind Adiga
 - 3. Amish Tripathi
 - 4. Vikram Chandra

Question ID : 9895807484
Chosen Option : 4

Q.4
7 The _____ introduced for the first time Indian representation in the institutions like Viceroy's executive and the legislative council.

- Ans
- 1. Government of India Act of 1858
 - 2. Pitt's India Act
 - 3. Indian Councils Act of 1861
 - 4. Regulating Act 1773

Question ID : 9895807491
Chosen Option : 2

Q.4
8 Which Indian won the Gold in Men's shot put at the 2018 Asian Games?

- Ans
- 1. Tajinderpal Singh Toor
 - 2. Sharath Kamal Achanta
 - 3. Jitu Rai
 - 4. Ragala Venkat Rahul

Question ID : 9895807481
Chosen Option : 1

Q.4
9 The emergency provision under article 356 of India's Constitution is influenced by the Weimar Constitution of _____.

- Ans
- 1. France
 - 2. United States
 - 3. Germany
 - 4. United Kingdom

Question ID : 9895807489
Chosen Option : 4

Q.5
0 Chandragupta's son _____ extended the Mauryan empire over the entire sub-continent of India.

- Ans
- 1. Dantidurga
 - 2. Skandagupta
 - 3. Harihara I
 - 4. Bindusara

Question ID : 9895807500
Chosen Option : 3

Q.5
1

DIRECTIONS: Study the following table carefully to answer these question.

Populations (in thousands) of Five States over the years					
Years	STATE				
	A	B	C	D	E
2003	125	210	85	150	98
2006	135	225	89	170	110
2009	142	240	93	180	130
2012	148	250	99	215	140
2015	155	270	105	230	145
2018	160	290	110	240	160

Which state had the highest per cent rise in population from 2006 to 2009?

- Ans 1. E
 2. C
 3. D
 4. A

Question ID : 9895807826

Chosen Option : 1

Q.5
2 The value of $[1 \div \{1 + 1 \div (1 + 1 \div 2)\}] = ?$

- Ans 1. 2
 2. $\frac{1}{2}$
 3. 1
 4. $\frac{3}{5}$

Question ID : 9895807804

Chosen Option : 1

Q.5
3 A train 175 m long travels at a speed of 36 kmph. The time it would take to cross a platform 125 m long is:

- Ans 1. 30 seconds
 2. 15 seconds
 3. 25 seconds
 4. 10 seconds

Question ID : 9895807820

Chosen Option : 2

Q.5
4 A sum of money doubles itself in 12 years, if invested at simple interest.

What is the rate of interest allowed on the investment?

Ans

1. $11\frac{1}{8}\%$

2. $7\frac{1}{2}\%$

3. $8\frac{1}{3}\%$

4. $9\frac{1}{9}\%$

Question ID : 9895807816

Chosen Option : 1

Q.5 What the largest number which divides 34, 58 and 94 leaving the same remainder in each case?
5

Ans 1. 6

2. 9

3. 12

4. 8

Question ID : 9895807803

Chosen Option : 3

Q.5 The capacity of a cylindrical tank is 246.4 litres. If the height is 4 metres, what is the diameter of the base? (Use $\pi \frac{22}{7}$)
6

Ans 1. 0.14 metres

2. 2.8 metres

3. 0.28 metres

4. 1.4 metres

Question ID : 9895807824

Chosen Option : 1

Q.5 In a village, 30% of the population is minors, 60% of the minors population are educated, 40% of the majors population are uneducated. The total educated population is 6000. What is the population of the town?
7

Ans 1. 8000

2. 10000

3. 12000

4. 9000

Question ID : 9895807810

Chosen Option : 3

Q.5 The ratio of the present age of a man and his wife is 4 : 3. After 4 years, this ratio will be 9 : 7. If at the time of the marriage, the ratio was 5 : 3, then how many years ago they were married?
8

Ans 1. 10 years

2. 8 years

3. 12 years

4. 15 years

Question ID : 9895807814

Chosen Option : 1

Q.5
9

DIRECTIONS: Study the following table carefully to answer these question.

Populations (in thousands) of Five States over the years					
Years	STATE				
	A	B	C	D	E
2003	125	210	85	150	98
2006	135	225	89	170	110
2009	142	240	93	180	130
2012	148	250	99	215	140
2015	155	270	105	230	145
2018	160	290	110	240	160

What was the average population of all the states together in 2009?

- Ans
1. 1,57,200
 2. 1,75,000
 3. 1,57,000
 4. 1,72,500

Question ID : 9895807825

Chosen Option : 3

Q.6
0 The probability that a leap year selected at random contains 53 Sundays is:

- Ans
1. $\frac{2}{7}$
 2. $\frac{1}{53}$
 3. $\frac{3}{7}$
 4. $\frac{1}{7}$

Question ID : 9895807809

Chosen Option : 3

Q.6
1 By selling an item at $\frac{3}{5}$ of the actual selling price, a trader makes a profit of 20%. If he sells the product at the actual selling price, then what will be the profit percentage?

- Ans
1. 75%
 2. 100%
 3. 80%
 4. 50%

Question ID : 9895807812

Chosen Option : 1

Q.6
2 A person distributes his pens among four friends A, B, C and D in the ratio of $\frac{1}{3} : \frac{1}{4} : \frac{1}{5} : \frac{1}{6}$. What is the minimum number of pens that the person should have?

- Ans 1. 66
 2. 61
 3. 70
 4. 57

Question ID : 9895807815
Chosen Option : 1

Q.6
3 The diagonal of a square A is $(a + b)$. The diagonal of a square whose area is twice the area of square A is

- Ans 1. $2(a + b)$
 2. $\sqrt{2}(a - b)$
 3. $\sqrt{2}(a + b)$
 4. $2(a + b)^2$

Question ID : 9895807822
Chosen Option : 4

Q.6
4 **DIRECTIONS:** Study the following table carefully to answer these question.

Populations (in thousands) of Five States over the years					
Years	STATE				
	A	B	C	D	E
2003	125	210	85	150	98
2006	135	225	89	170	110
2009	142	240	93	180	130
2012	148	250	99	215	140
2015	155	270	105	230	145
2018	160	290	110	240	160

What is approximate percent rise in population of state C in 2018 from 2003?

- Ans 1. 28
 2. 29
 3. 32
 4. 24

Question ID : 9895807827
Chosen Option : 4

Q.6
5 A and B can finish a job in 15 days, while A, B and C can finish it in 10 days. C alone will finish the job in how many days?

- Ans 1.

2. 16 days

3. 20 days

4. 30 days

Question ID : 9895807818

Chosen Option : 1

Q.6 What should come in place of the question mark (?) in the following question?

$$7 \times 8 + 8 \div 2 - 32 \times \left(\frac{1}{8}\right) - 6 \times 8 = ?$$

Ans 1. 8

2. 10

3. 9

4. 7

Question ID : 9895807805

Chosen Option : 1

Q.6 The average age of a class of 20 students is 20 years. If a new student, whose age is 20 years, joins the class, then the new average age of the class (in years) will be:

Ans 1. 23

2. 22

3. 21

4. 20

Question ID : 9895807806

Chosen Option : 3

Q.6 Fifteen persons can complete a piece of work in 8 days. How many more persons are needed to complete twice the work in 12 days?

Ans 1. 3

2. 5

3. 4

4. 2

Question ID : 9895807819

Chosen Option : 3

Q.6 The ratio of the present ages of A and B is 11 : 4. 15 years ago, the ratio of their ages was 8 : 1. Five years ago the ratio of the ages of B and C was 3 : 2. What is C's present age?

Ans 1. 25 years

2. 15 years

3. 10 years

4. 22 years

Question ID : 9895807813

Chosen Option : 2

Q.7 T1 and T2 are 400 km apart. At 8:00 a.m., buses A and B left T1 and T2 simultaneously for T2 and T1 respectively. If the speeds of A and B are 30 kmph and 70 kmph respectively, at what time will they meet?

Ans 1.

2. 10 : 30 a.m.
3. 12 noon
4. 11:00 a.m.

Question ID : 9895807821
Chosen Option : 2

Q.7
1 In what time will ₹ 1000 amount to ₹ 1331 at 20% per annum, compounded half yearly?

- Ans
1. 1 year
2. $2\frac{1}{2}$ years
3. 2 years
4. $1\frac{1}{2}$ years

Question ID : 9895807817
Chosen Option : 2

Q.7
2 The circumference of a given circle is 176 cm. What is the approximate diagonal of a square whose side is half of the radius of a given circle?

- Ans
1. 15 cm
2. 24 cm
3. 12 cm
4. 20 cm

Question ID : 9895807823
Chosen Option : 4

Q.7
3 Kovind marked an article 30% above its cost price and allowed a discount of 10%. Find his profit percentage?

- Ans
1. 15%
2. 20%
3. 17%
4. 12%

Question ID : 9895807808
Chosen Option : 4

Q.7
4 The average weights of the boys and the girls in a class are 70 kg and 60 kg respectively. Then the average weight of all the students in the class (in kg) is:

- Ans
1. Cannot be determined
2. 65
3. 67
4. 66

Question ID : 9895807807
Chosen Option : 2

Q.7
5 If an equipment sold at 22% profit instead of 9% profit, then the profit would be ₹ 91 more. What is the cost price of equipment?

- Ans
- 1.

2. ₹ 720

3. ₹ 500

4. ₹ 600

Question ID : 9895807811

Chosen Option : 1

Section : English Language

Q.1 Select the word which means the same as the group of words given.

The assembled spectators or listeners at a public event

Ans 1. Admirers

2. Audience

3. Witnesses

4. Gallery

Question ID : 9895808460

Chosen Option : 2

Q.2 Identify the segment in the sentence which contains the grammatical error from the given options.

One of the most important task in agriculture is to turn the soil and loosen it.

Ans 1. turn the soil

2. important task

3. loosen it

4. One of the

Question ID : 9895808439

Chosen Option : 3

Q.3 Select the most appropriate word to fill in the blank.

Though Sam _____ French for seven years, he did not know many words of French.

Ans 1. had studied

2. was study

3. have been studying

4. has studied

Question ID : 9895808446

Chosen Option : 3

Comprehension:

SubQuestion No : 4

Q.4 Select the most appropriate option that will fill in the blank number 1.

- Ans
- 1. older
 - 2. aged
 - 3. ancient
 - 4. elder

Question ID : 9895808448
Chosen Option : 3

Comprehension:

In the following passage some words have been deleted. Fill in the blanks with the help of the alternatives given. Select the most appropriate option for each number.

India is one of the (1) _____ civilizations in the world. It (2) _____ achieved multi-faceted socioeconomic progress (3) _____ the last five decades. It has moved (4) _____ displaying remarkable (5) _____ in the field of agriculture.

SubQuestion No : 5

Q.5 Select the most appropriate option that will fill in the blank number 2.

- Ans
- 1. have
 - 2. were been
 - 3. was being
 - 4. has

Question ID : 9895808449
Chosen Option : 4

Comprehension:

In the following passage some words have been deleted. Fill in the blanks with the help of the alternatives given. Select the most appropriate option for each number.

India is one of the (1) _____ civilizations in the world. It (2) _____ achieved multi-faceted socioeconomic progress (3) _____ the last five decades. It has moved (4) _____ displaying remarkable (5) _____ in the field of agriculture.

SubQuestion No : 6

Q.6 Select the most appropriate option that will fill in the blank number 3.

- Ans
- 1. above
 - 2. during
 - 3. across
 - 4. between

Question ID : 9895808450
Chosen Option : 2

Comprehension:

In the following passage some words have been deleted. Fill in the blanks with the help of the alternatives given. Select the most appropriate option for each number.

India is one of the (1) _____ civilizations in the world. It (2) _____ achieved multi-faceted socioeconomic progress (3) _____ the last five decades. It has moved (4) _____ displaying remarkable (5) _____ in the field of agriculture.

SubQuestion No : 7

Q.7 Select the most appropriate option that will fill in the blank number 4.

- Ans
- 1. front
 - 2. away
 - 3. in
 - 4. forward

Question ID : 9895808451
Chosen Option : 4

Comprehension:

In the following passage some words have been deleted. Fill in the blanks with the help of the alternatives given. Select the most appropriate option for each number.

India is one of the (1) _____ civilizations in the world. It (2) _____ achieved multi-faceted socioeconomic progress (3) _____ the last five decades. It has moved (4) _____ displaying remarkable (5) _____ in the field of agriculture.

SubQuestion No : 8

Q.8 Select the most appropriate option that will fill in the blank number 5.

- Ans
- 1. march
 - 2. motion
 - 3. course
 - 4. progress

Question ID : 9895808452
Chosen Option : 4

Q.9 Select the most appropriate option to substitute the underlined segment in the given sentence. If there is no need to substitute it, select No substitution required.

The Government of India launched the Swachh Bharat Mission on 2 October 2014 to promote cleanliness.

- Ans
- 1. Government to India launch
 - 2. No substitution required
 - 3. Government of India launching
 - 4. Government for India launched

Question ID : 9895808444
Chosen Option : 2

Q.1
0 Select the synonym of the given word.

Aloof

- Ans 1. Withdrawn
 2. Jovial
 3. Informal
 4. Social

Question ID : 9895808454
Chosen Option : 3

Q.1
1 Select the antonym of the given word.

Encourage

- Ans 1. Conquer
 2. Advance
 3. Frustrate
 4. Establish

Question ID : 9895808455
Chosen Option : 3

Q.1
2 Identify the segment in the sentence which contains the grammatical error from the given options.

Metals like iron get rusted when left exposing to moisture and air.

- Ans 1. Metals like iron
 2. exposing to
 3. get rusted
 4. when left

Question ID : 9895808441
Chosen Option : 1

Q.1
3 Select the most appropriate option to substitute the underlined segment in the given sentence. If there is no need to substitute it, select No substitution required.

India's diversity have always been recognize as a source of its strength.

- Ans 1. have always being recognize
 2. No substitution required
 3. has always been recognized
 4. have always been recognize

Question ID : 9895808443
Chosen Option : 3

Q.1
4 Select the synonym of the given word.

Interfere

- Ans 1. Meddle
 2. Activate

3. Hasten

4. Delay

Question ID : 9895808453

Chosen Option : 1

Q.1
5 Select the wrongly spelt word.

Ans 1. Befriend

2. Attention

3. Exhibetion

4. Contribute

Question ID : 9895808462

Chosen Option : 3

Q.1
6 Select the meaning of the given idiom.

Skate on thin ice

Ans 1. to be adventurous

2. to have a specific skill

3. to be careless

4. to be in a risky situation

Question ID : 9895808458

Chosen Option : 1

Q.1
7 Identify the segment in the sentence which contains the grammatical error from the given options.

We are all aware that our environment is not what it use to be.

Ans 1. aware that

2. is not

3. use to

4. We are

Question ID : 9895808440

Chosen Option : 3

Q.1
8 Select the wrongly spelt word.

Ans 1. Ascend

2. Bouquet

3. Defination

4. Compact

Question ID : 9895808461

Chosen Option : 3

Q.1
9 Select the meaning of the given idiom.

Butterflies in the stomach

- Ans
- 1. An impractical idea
 - 2. Sense of danger
 - 3. A feeling of nervousness
 - 4. To be ill

Question ID : 9895808457
Chosen Option : 2

Q.2
0 Select the word which means the same as the group of words given.

An account of someone's life written by someone else

- Ans
- 1. Autobiography
 - 2. Calligraphy
 - 3. Narration
 - 4. Biography

Question ID : 9895808459
Chosen Option : 4

Q.2
1 Select the most appropriate word to fill in the blank.

We have had our time of peace and _____, a time I will treasure as long as I live.

- Ans
- 1. unrest
 - 2. anxiety
 - 3. prosperity
 - 4. confusion

Question ID : 9895808463
Chosen Option : 3

Q.2
2 Select the most appropriate word to fill in the blank.

An old villager looked _____ him when his mother was away.

- Ans
- 1. to
 - 2. on
 - 3. after
 - 4. in

Question ID : 9895808445
Chosen Option : 3

Q.2
3 Select the most appropriate word to fill in the blank.

Some experts believe that animals' _____ sense of hearing helps them to hear or feel the earth's vibration.

- Ans
- 1. insensitive
 - 2. blunt
 - 3. demanding
 - 4. acute

Question ID : 9895808464

Chosen Option : 1

Q.2
4 Select the antonym of the given word.

Preserve

- Ans
- 1. Safeguard
 - 2. Destroy
 - 3. Descend
 - 4. Treasure

Question ID : 9895808456

Chosen Option : 2

Q.2
5 Select the most appropriate option to substitute the underlined segment in the given sentence. If there is no need to substitute it, select No substitution required.

People feel happy when it read a good and fascinating story.

- Ans
- 1. when they read
 - 2. No substitution required
 - 3. when they reading
 - 4. as it reads

Question ID : 9895808442

Chosen Option : 1

Section : Hindi Language

Q.1 रिक्त स्थान को भरने के लिए उपयुक्त शब्द का चयन करें।

जो कुछ लिखा जाये वह साफ और _____ हो ।

- Ans
- 1. स्पष्ट
 - 2. कठिन
 - 3. धुंधला
 - 4. मलिन

Question ID : 9895806926

Chosen Option : --

Q.2 रिक्त स्थान को भरने के लिए उपयुक्त शब्द का चयन करें।

मैंने _____ सारा कूड़ा साफ किया है।

- Ans
- 1. अपनी
 - 2. स्वयं
 - 3. अपने
 - 4. हमारा

Question ID : 9895806924

Chosen Option : --

Q.3 दिए गए शब्द के पर्यायवाची शब्द का चयन करें।

आकुल

- Ans
- 1. हताश
 - 2. गोकुल
 - 3. बेचैन
 - 4. चैन

Question ID : 9895806935
Chosen Option : --

Q.4 दिए गए वाक्य का वह भाग ज्ञात करें जिसमें कोई त्रुटि है।

व्यंग्य का चोट तो सुनार की तरह धीमी है लेकिन मार लुहार की चोट से भी अधिक करती है।

- Ans
- 1. व्यंग्य का चोट
 - 2. लेकिन मार लुहार की चोट से भी
 - 3. अधिक करती है।
 - 4. तो सुनार की तरह धीमी है

Question ID : 9895806918
Chosen Option : --

Q.5 दिए गए शब्द का विलोम चुनें।

एकल

- Ans
- 1. सामूहिक
 - 2. विरल
 - 3. विफल
 - 4. सरल

Question ID : 9895806933
Chosen Option : --

Q.6 दिये गये वाक्यांश के लिए एक शब्द दीजिये।

रास्ता दिखाने वाला

- Ans
- 1. मार्गदर्शक
 - 2. समदर्शी
 - 3. राहपथिक
 - 4. दूरदर्शी

Question ID : 9895806939
Chosen Option : --

Q.7

निम्नलिखित में से उस विकल्प का चयन करें जो 'कदम उखाड़ना' मुहावरे का अर्थ व्यक्त करता है।

Ans

1. तैयार होना
2. खुश हो जाना
- ✓ 3. भाग खड़े होना
- ✗ 4. झगड़ा होना

Question ID : 9895806937
Chosen Option : --

Q.8 दिए गए शब्द का विलोम चुनें।

मांसाहारी

Ans

- ✓ 1. बलिहारी
- ✗ 2. निराहार
- ✗ 3. शाकाहारी
- ✗ 4. निरंकारी

Question ID : 9895806934
Chosen Option : --

Q.9 दिये गये वाक्यांश के लिए एक शब्द दीजिये।

तीव्र बुद्धि वाला

Ans

- ✗ 1. मंदबुद्धि
2. कुशाग्रबुद्धि
3. दुर्बुद्धि
4. अल्पबुद्धि

Question ID : 9895806940
Chosen Option : --

Q.1 रिक्त स्थान को भरने के लिए उपयुक्त शब्द का चयन करें।

सोहन सब के _____ रहता है।

Ans

- ✗ 1. अंदर
- ✗ 2. अलग
- ✓ 3. साथ
- ✗ 4. दूर

Question ID : 9895806923
Chosen Option : --

Q.1
1

दिए गए वाक्य का वह भाग ज्ञात करें जिसमें कोई त्रुटि है।

अभिभावक ने विनम्रतापूर्वक कहा कि कृपया आप ही कृपा करके बताएँ कि वह कहाँ है?

Ans

- 1. कृपया आप ही कृपा करके बताएँ
- 2. कि वह कहाँ है?
- 3. विनम्रतापूर्वक कहा कि
- 4. अभिभावक ने

Question ID : 9895806917

Chosen Option : --

Q.1 2 दिए गए वाक्य में रेखांकित खंड को प्रतिस्थापित करने के लिए उपयुक्त विकल्प का चयन करें।

बहुत से उद्योगपतियों ने बैंक का कृण वापस नहीं लौटाया।

Ans

- 1. रुपये
- 2. पासबुक
- 3. राशि
- 4. कर्ज

Question ID : 9895806920

Chosen Option : --

Q.1 3 दिए गए वाक्य में रेखांकित खंड को प्रतिस्थापित करने के लिए उपयुक्त विकल्प का चयन करें।

जीवन में नियति का महत्वपूर्ण स्थान होता है।

Ans

- 1. कर्म
- 2. चरित्र
- 3. स्वभाव
- 4. भाग्य

Question ID : 9895806922

Chosen Option : --

Q.1 4 दिए गए शब्द के पर्यायवाची शब्द का चयन करें।

कृषक

Ans

- 1. फसल
- 2. मजदूर
- 3. खेती
- 4. किसान

Question ID : 9895806936

Chosen Option : --

Q.1 5 दिए गए वाक्य का वह भाग ज्ञात करें जिसमें कोई त्रुटि है।

उनका गाँव के भीतर दो कुएँ हैं किन्तु एक सूखा हुआ है।

Ans

1. दो कुएँ हैं
2. उनका गाँव के भीतर
3. किन्तु एक
4. सूखा हुआ है।

Question ID : 9895806919
Chosen Option : --

Q.1 निम्नलिखित में से उस विकल्प का चयन करें जो 'आपे से बाहर होना' मुहावरे का अर्थ व्यक्त करता है।

Ans

1. बेमेल काम करना
2. बहुत पछताना
3. क्रोध से अपने वश में न रहना
4. घर से निकल जाना

Question ID : 9895806938
Chosen Option : --

Comprehension:

निम्नलिखित गद्यांश के रिक्त स्थानों की पूर्ति गद्यांश के नीचे दिए गए प्रश्नों के अनुसार कीजिए-

स्वस्थ जीवन जीने के लिए शुद्ध और शांतिपूर्ण पर्यावरण _____ (1) होता है। पर्यावरण वह है जो प्राकृतिक रूप से हमारे चारों तरफ है और पृथ्वी पर हमारे दैनिक जीवन को _____ (2) करता है। जो हवा हम हर पल साँस के रूप में _____ (3) हैं, पानी जो हम अपनी दिनचर्या में इस्तेमाल करते हैं, पौधे, जानवर आदि पर्यावरण के तहत आते हैं। अगर _____ (4) के संतुलन में किसी भी प्रकार की _____ (5) आती है तो इसका हमारे पर्यावरण पर गलत असर पड़ता है।

SubQuestion No : 17

Q.1

7 गद्यांश में संकेतित रिक्त स्थान (1) के लिए उपयुक्त शब्द होगा।

Ans

1. आवश्यक
2. संभव
3. अनावश्यक
4. असंभव

Question ID : 9895806928
Chosen Option : --

Comprehension:

निम्नलिखित गद्यांश के रिक्त स्थानों की पूर्ति गद्यांश के नीचे दिए गए प्रश्नों के अनुसार कीजिए-

स्वस्थ जीवन जीने के लिए शुद्ध और शांतिपूर्ण पर्यावरण _____ (1) होता है। पर्यावरण वह है जो प्राकृतिक रूप से हमारे चारों तरफ है और पृथ्वी पर हमारे दैनिक जीवन को _____ (2) करता है। जो हवा हम हर पल साँस के रूप में _____ (3) हैं, पानी जो हम अपनी दिनचर्या में इस्तेमाल करते हैं, पौधे, जानवर आदि पर्यावरण के तहत आते हैं। अगर _____ (4) के संतुलन में किसी भी प्रकार की _____ (5) आती है तो इसका हमारे पर्यावरण पर गलत असर पड़ता है।

SubQuestion No : 18

Q.1
8 गद्यांश में संकेतित रिक्त स्थान (2) के लिए उपयुक्त शब्द होगा।

- Ans
- 1. सीमित
 - 2. प्रभावित
 - 3. प्रताड़ित
 - 4. प्रकाशित

Question ID : 9895806929
Chosen Option : --

Comprehension:

निम्नलिखित गद्यांश के रिक्त स्थानों की पूर्ति गद्यांश के नीचे दिए गए प्रश्नों के अनुसार कीजिए-

स्वस्थ जीवन जीने के लिए शुद्ध और शांतिपूर्ण पर्यावरण _____ (1) होता है। पर्यावरण वह है जो प्राकृतिक रूप से हमारे चारों तरफ है और पृथ्वी पर हमारे दैनिक जीवन को _____ (2) करता है। जो हवा हम हर पल साँस के रूप में _____ (3) हैं, पानी जो हम अपनी दिनचर्या में इस्तेमाल करते हैं, पौधे, जानवर आदि पर्यावरण के तहत आते हैं। अगर _____ (4) के संतुलन में किसी भी प्रकार की _____ (5) आती है तो इसका हमारे पर्यावरण पर गलत असर पड़ता है।

SubQuestion No : 19

Q.1
9 गद्यांश में संकेतित रिक्त स्थान (3) के लिए उपयुक्त शब्द होगा।

- Ans
- 1. लेते
 - 2. बहते
 - 3. चलते
 - 4. उड़ते

Question ID : 9895806930
Chosen Option : --

Comprehension:

निम्नलिखित गद्यांश के रिक्त स्थानों की पूर्ति गद्यांश के नीचे दिए गए प्रश्नों के अनुसार कीजिए-

स्वस्थ जीवन जीने के लिए शुद्ध और शांतिपूर्ण पर्यावरण _____ (1) होता है। पर्यावरण वह है जो प्राकृतिक रूप से हमारे चारों तरफ है और पृथ्वी पर हमारे दैनिक जीवन को _____ (2) करता है। जो हवा हम हर पल साँस के रूप में _____ (3) हैं, पानी जो हम अपनी दिनचर्या में इस्तेमाल करते हैं, पौधे, जानवर आदि पर्यावरण के तहत आते हैं। अगर _____ (4) के संतुलन में किसी भी प्रकार की _____ (5) आती है तो इसका हमारे पर्यावरण पर गलत असर पड़ता है।

SubQuestion No : 20

Q.2
0 गद्यांश में संकेतित रिक्त स्थान (4) के लिए उपयुक्त शब्द होगा।

Ans

1. आकृति
2. विकृति
3. अनुकृति
4. प्रकृति

Question ID : 9895806931

Chosen Option : --

Comprehension:

निम्नलिखित गद्यांश के रिक्त स्थानों की पूर्ति गद्यांश के नीचे दिए गए प्रश्नों के अनुसार कीजिए-

स्वस्थ जीवन जीने के लिए शुद्ध और शांतिपूर्ण पर्यावरण _____ (1) होता है। पर्यावरण वह है जो प्राकृतिक रूप से हमारे चारों तरफ है और पृथ्वी पर हमारे दैनिक जीवन को _____ (2) करता है। जो हवा हम हर पल साँस के रूप में _____ (3) हैं, पानी जो हम अपनी दिनचर्या में इस्तेमाल करते हैं, पौधे, जानवर आदि पर्यावरण के तहत आते हैं। अगर _____ (4) के संतुलन में किसी भी प्रकार की _____ (5) आती है तो इसका हमारे पर्यावरण पर गलत असर पड़ता है।

SubQuestion No : 21

Q.2
1 गद्यांश में संकेतित रिक्त स्थान (5) के लिए उपयुक्त शब्द होगा।

Ans

1. अमावट
2. सजावट
3. बनावट
4. रुकावट

Question ID : 9895806932

Chosen Option : --

Q.2
2 सही वर्तनी वाले शब्द का चयन करें।

- Ans
- 1. साक्षर
 - 2. शाक्षर
 - 3. सक्षर
 - 4. साक्षार

Question ID : 9895806941

Chosen Option : --

Q.2
3 सही वर्तनी वाले शब्द का चयन करें।

- Ans
- 1. दीवस
 - 2. दिवश
 - 3. दीवास
 - 4. दिवस

Question ID : 9895806942

Chosen Option : --

Q.2
4 दिए गए वाक्य में रेखांकित खंड को प्रतिस्थापित करने के लिए उपयुक्त विकल्प का चयन करें।

ईश्वर मानव का सृजन करके वन्दनीय हो गया।

- Ans
- 1. उत्पत्ति
 - 2. पैदावार
 - 3. जन्म
 - 4. निर्माण

Question ID : 9895806921

Chosen Option : --

Q.2
5 रिक्त स्थान को भरने के लिए उपयुक्त शब्द का चयन करें।

उन्हीं शब्दों का प्रयोग करना चाहिए _____ प्रासंगिक महत्व है।

- Ans
- 1. उनका
 - 2. जिनका
 - 3. किनका
 - 4. जिसका

Question ID : 9895806925

Chosen Option : --