

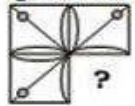
**Constable (GD) in CAPFs, NIA, SSF and Rifleman (GD) in Assam Rifles Examination, 2018**

Roll No. :	
Registration No.	
Name :	
Exam Venue :	
Exam Time :	9:00 AM - 10:30 AM
Exam Date :	06/03/2019

Section : General Section

Q.1 Which of the following answer figure will complete the given figure?

Question figure:



Ans

- 1.
- 2.
- 3.
- 4.

Question ID : 9895808610

Chosen Option : 2

Q.2

Four brothers P, Q, R and S go to a hotel. They book four hotel rooms numbered 301, 302, 303 and 304. Sum of room numbers of P and R is 603 and the sum of room numbers of R and S is 604. What is the sum of room numbers of P, Q

- Ans  1. 907
- 2. 904
  - 3. 903
  - 4. 905

Question ID : 9895808600

Chosen Option : 1

Q.3

Four words have been given out of which three are alike in some manner, while one is different. Choose the odd one.

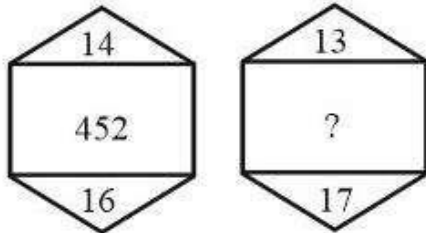
- Ans  1. Bhagavad Gita
- 2. Bible

3. Quran

4. Jewish

Question ID : 9895808592  
Chosen Option : 4

Q.4 Find the missing number from the below options.



Ans  1. 400

2. 458

3. 456

4. 440

Question ID : 9895808607  
Chosen Option : 2

Q.5 Select the related word pair from the given alternatives.

Teeth : Cut :: \_\_\_\_\_ : \_\_\_\_\_

Ans  1. Legs : Walk

2. Broom : Fly

3. Tubelight : Heat

4. Food : Smell

Question ID : 9895808593  
Chosen Option : 1

Q.6 In a certain code, TIM is coded as RGK, then how is PAINE coded in the same way?

Ans  1. NGYCL

2. NGYLC

3. NYGCL

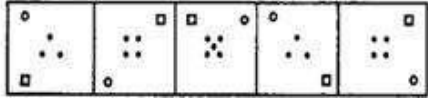
4. NYGLC

Question ID : 9895808596  
Chosen Option : 2

Q.7

Choose the option which completes the given figure series.

Question Figure



Ans

- 1.
- 2.
- 3.
- 4.

Question ID : 9895808609

Chosen Option : 2

Q.8 Select the correct option that will fill in the blank and complete the series.

AB, BA, ABC, CBA, ABCD, \_\_\_\_\_.

Ans

- 1. DCBA
- 2. CABD
- 3. ACBD
- 4. BACD

Question ID : 9895808590

Chosen Option : 1

Q.9 Select the correct option that will fill in the blank and complete the series.

2, 7, 5, 10, 8, 13, \_\_\_\_\_

Ans

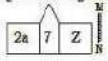
- 1. 15
- 2. 11
- 3. 38
- 4. 9

Question ID : 9895808603

Chosen Option : 2

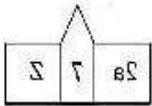
Choose the option that most closely resembles the mirror image of the given figure when mirror is placed at right side.

Question Figure:

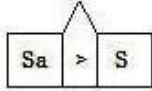


Ans

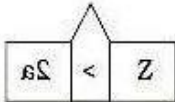
✓ 1.



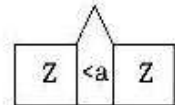
✗ 2.



✗ 3.



✗ 4.



Question ID : 9895808612

Chosen Option : 1

Q.1 Select the related word pair from the given alternatives.

Celsius : Temperature :: \_\_\_\_\_ : \_\_\_\_\_

Ans

✓ 1. Kilometer : Distance

✗ 2. Bank note : Office

✗ 3. Meter : Water

✗ 4. Bulb : Electric current

Question ID : 9895808594

Chosen Option : 1

Q.1 Select the option that is related to the third term in the same way as the second term is related to the first term.

2

ROSEBERRY : SEBERRYRO :: BEAUTIFUL : ?

Ans

✗ 1. TIFULBEAU

✗ 2. EAUTIFULB

✓ 3. AUTIFULBE

✗ 4. UTIFULBEA

Question ID : 9895808595

Chosen Option : 3

Q.1 Four letter clusters have been given out of which three are alike in some manner, while one is different. Choose the odd one.

3

Ans

✗ 1. STaY

✗ 2. TRaY

✓ 3. AWaY

Question ID : 9895808591  
Chosen Option : 4

Q.1 4 A piece of paper is folded and cut as shown below in the question figures. From the given answer figures, indicate how it will appear when opened.

Question Figure:



Ans



Question ID : 9895808613  
Chosen Option : 3

Q.1 5 Select the correct option that will fill in the blank and complete the series.

0.3, 0.8, 2.3, 4.8, \_\_\_\_\_

Ans ~~1.~~ 7.5

~~2.~~ 7.3

~~3.~~ 6.5

4. 8.3

Question ID : 9895808604  
Chosen Option : 4

Q.1 6

The statements below are followed by conclusions labeled I, II, III and IV. Assuming that the information in the statements is true, even if it appears to be at variance with generally established facts, decide which conclusion(s) logically and definitely follow(s) from the information given in the statements.

**Statements:**

All Iris are Cornea.

Some Cornea are Lens.

All Lens are Retina.

**Conclusions:**

I. Some Retina are Cornea

II. Some Retina are Iris

III. Some Lens are Iris

IV. Some Cornea are Retina

- Ans  1. Only I and IV follow
2. Only I and II follow
3. None follows
4. Only III and IV follow

Question ID : 9895808601

Chosen Option : 1

Q.1  
7 The statements below are followed by two conclusions labeled I and II. Assuming that the information in the statements is true, even if it appears to be at variance with generally established facts, decide which conclusion(s) logically and definitely follow(s) from the information given in the statements.

**Statements:**

Some shirts are socks.

No sock is red.

**Conclusion:**

I. Some socks are shirts.

II. No shirt is red

- Ans  1. Only conclusion II follows
2. Only conclusion I follows
3. Either conclusion I or II follows
4. Neither conclusion I nor II follows

Question ID : 9895808602

Chosen Option : 2

Q.1  
8 If PT is written as 8-10, how will NLR be written?

- Ans  1. 7-6-12
2. 8-6-11
3. 7-6-8
4. 7-6-9

Question ID : 9895808597

Q.1 Select the option that is related to the Third term in the same way as the second term is related to the first term.

9

10 : 30 :: 68 : ?

- Ans
- 1. 120
  - 2. 100
  - 3. 112
  - 4. 130

Question ID : 9895808605

Chosen Option : 3

Q.2 Four options have been given out of which three are alike in some manner, while one is different. Choose the odd one.

0

- Ans
- 1. 6388
  - 2. 3568
  - 3. 1238
  - 4. 2348

Question ID : 9895808606

Chosen Option : 3

Q.2 A, M, P, D, Q, R, W and B are sitting around a circle facing at the centre. D is fourth to the left of A who is third to the right of M. P is third to the left of Q who is third to the left of M. R is third to the right of W who is second to the right of B.

1

In which of the following pairs is the second person sitting to the immediate right of the first person?

- Ans
- 1. AB
  - 2. QB
  - 3. RM
  - 4. MD

Question ID : 9895808598

Chosen Option : 2

Q.2 Four boys A, B, C, D and four girls P, Q, R, S are playing merry go round in such a way that they face the centre and form a circle. No two girls or no two boys are next to each other. A is to the immediate left of R, who is opposite to Q. P and Q have only C between them. P is opposite to S, who is to the immediate right of B.

2

If B is the only person between R and S, then who is opposite B?

- Ans
- 1. A
  - 2. Q
  - 3. C
  - 4. D

Question ID : 9895808599

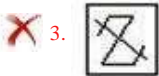
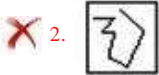

Chosen Option : 3

Choose the option figure in which the problem figure is hidden/embedded.

Question figure



Ans



Question ID : 9895808611

Chosen Option : 1

Q.2 Select the correct combination of mathematical signs to replace \*\* signs and to balance the given equation:

$$530 * 2 * 3 * 5 * 800$$

Ans

✗ 1.  $\div + - =$

✗ 2.  $\div - - =$

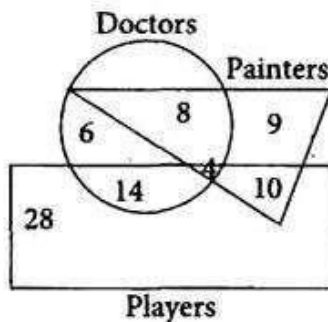
✓ 3.  $\div \times + =$

✗ 4.  $+ + \times =$

Question ID : 9895808608

Chosen Option : 3

Q.2 Study the diagram carefully and answer the given questions.



How many painters are neither doctors nor players?

Ans

✗ 1. 6

✓ 2. 9

✗ 3. 10

✗ 4. 8

Question ID : 9895808614



Chosen Option : 2

Q.2 Minimum Support Price for 2018-19 for Cotton of the Medium Staple variety is set at \_\_\_\_\_.

6

- Ans
- 1. ₹ 2,897 per quintal
  - 2. ₹ 1,950 per quintal
  - 3. ₹ 5,150 per quintal
  - 4. ₹ 2,430 per quintal

Question ID : 9895807513

Chosen Option : 4

Q.2 Who is the author of the, 'Byomkesh Bakshi Stories'?

7

- Ans
- 1. Sharadindu Bandyopadhyay
  - 2. Ritwik Ghatak
  - 3. Satyajit Ray
  - 4. David Davidar

Question ID : 9895807509

Chosen Option : 1

Q.2 India defeated the team from which country in the final to win the under 19 Cricket World Cup, 2018?

8

- Ans
- 1. England
  - 2. Australia
  - 3. South Africa
  - 4. Pakistan

Question ID : 9895807507

Chosen Option : 2

Q.2 Which freedom fighters were hanged for the Kakori conspiracy case?

9

- Ans
- 1. Chittaranjan Das and Vasudev Balwant Phadke
  - 2. Krishnaji Gopal Karve and Bagha Jatin
  - 3. Ram Prasad Bismil and Ashfaqulla Khan
  - 4. Khudiram Bose and Chandra Shekhar Azad

Question ID : 9895807526

Chosen Option : 3

Q.3 The relation between the period of a simple pendulum 'T' and its length 'L' is \_\_\_\_\_. ('g' is acceleration due to gravity)

0

- Ans
- 1.  $T=2\pi \sqrt{L/g}$
  - 2.  $T=4\pi \sqrt{g/L}$

3.  $T=4\pi \sqrt{(L/g)}$

4.  $T=2\pi \sqrt{(g/L)}$

Question ID : 9895807517

Chosen Option : 4

Q.3  
1 The best examples of which script are found in the rock-cut edicts of Asoka?

Ans  1. Grantha

2. Brahmi

3. Kadamba

4. Sharada

Question ID : 9895807503

Chosen Option : 1

Q.3  
2 Which tribal festival in Chhattisgarh is dedicated to goddess Kesharpal Kesharpalin Devi, one of the tribal deities?

Ans  1. Sarhul

2. Madai

3. Puli Kali

4. Minjar

Question ID : 9895807504

Chosen Option : 2

Q.3  
3 The atmosphere of Mars is mostly composed of \_\_\_\_\_.

Ans  1. Ammonia

2. Carbon dioxide

3. Oxygen

4. Hydrogen

Question ID : 9895807524

Chosen Option : 1

Q.3  
4 Who was the first and the most important king of the Rashtrakuta dynasty of Karnataka who defeated the Chalukyas of Badami?

Ans  1. Dantidurga

2. Harihara I

3. Uttama

4. Bindusara

Question ID : 9895807525

Chosen Option : 4

Q.3  
5

In which amendment to the constitution were the Bodo, Dogri, Santhali and Maithli added to the list of recognised languages?

- Ans
- 1. 73rd Constitution Amendment Act of 2003
  - 2. 92nd Constitution Amendment Act of 2003
  - 3. 103rd Constitution Amendment Act, 2018
  - 4. 101st Constitution Amendment Act, 2016

Question ID : 9895807515  
Chosen Option : 2

Q.3  
6 Which element is placed in the 5th Period and IIA Group of the periodic table?

- Ans
- 1. Lead (At no 82)
  - 2. Tellurium (At no 52)
  - 3. Barium (At no 56)
  - 4. Strontium (At no 38)

Question ID : 9895807519  
Chosen Option : 3

Q.3  
7 Which of the following rivers is NOT a tributary of the Krishna?

- Ans
- 1. Venna
  - 2. Betwa
  - 3. Bhima
  - 4. Koyna

Question ID : 9895807522  
Chosen Option : 3

Q.3  
8 Which Maratha warrior died in the successful defence of the Sinhagad fort fighting against the Mughal army?

- Ans
- 1. Chimaji Appa
  - 2. Baji Prabhu Deshpande
  - 3. Tanaji Malusare
  - 4. Baji Pasalkar

Question ID : 9895807527  
Chosen Option : 2

Q.3  
9 The prefix '\_\_\_\_\_' is equal to a factor of  $10^{15}$ .

- Ans
- 1. atto
  - 2. peta
  - 3. femto
  - 4.

Question ID : 9895807518  
Chosen Option : 2

Q.4  
0 The concept of the Freedom of trade in India's Constitution is adopted from the Constitution of which country?

- Ans
- 1. United Kingdom
  - 2. United States
  - 3. Australia
  - 4. Ireland

Question ID : 9895807514  
Chosen Option : 4

Q.4  
1 Mutual Funds asset base in India stood at \_\_\_\_\_ at end of November 2018.

- Ans
- 1. ₹ 31 lakh crore
  - 2. ₹ 47 lakh crore
  - 3. ₹ 24 lakh crore
  - 4. ₹ 19 lakh crore

Question ID : 9895807511  
Chosen Option : 4

Q.4  
2 The \_\_\_\_\_ are the triangular muscles of the shoulder.

- Ans
- 1. Masseter
  - 2. Achilles tendon
  - 3. Deltoids
  - 4. Sartorius

Question ID : 9895807521  
Chosen Option : 3

Q.4  
3 The Elephant is a symbol of which Indian political party?

- Ans
- 1. National Congress Party
  - 2. Communist Party of India
  - 3. Bahujan Samaj Party
  - 4. Rashtriya Janata Dal

Question ID : 9895807516  
Chosen Option : 3

Q.4  
4 Who won the Miss World title in 1997?

- Ans
- 1. Reita Faria
  - 2. Diana Hayden

3. Tara Anne Fonseca

4. Zeenat Aman

Question ID : 9895807510

Chosen Option : 1

Q.4  
5 Which Indian won the Gold in Women's freestyle wrestling, 50 kg, at the 2018 Asian Games?

Ans  1. Vinesh Phogat

2. Babita Kumari

3. Sakshi Malik

4. Kavita Devi

Question ID : 9895807506

Chosen Option : 2

Q.4  
6 The Bhangra dance form is popular in which state?

Ans  1. Puducherry

2. Maharashtra

3. Punjab

4. Rajasthan

Question ID : 9895807505

Chosen Option : 3

Q.4  
7 \_\_\_\_\_ alloy consists of nickel, copper and zinc.

Ans  1. Solder

2. German silver

3. Bell Metal

4. Rose Metal

Question ID : 9895807520

Chosen Option : 2

Q.4  
8 All of the following siblings have won the Dadasaheb Phalke Award, EXCEPT \_\_\_\_\_.

Ans  1. Lata Mangeshkar and Asha Bhosle

2. B R Chopra and Yash Chopra

3. Raj Kapoor and Shashi Kapoor

4. Mahesh Bhatt and Vikram Bhatt

Question ID : 9895807508

Chosen Option : 3

Q.4  
9 The Zoji La Pass is in which mountain range?

- Ans
- 1. Zaskar Range
  - 2. Ladakh Range
  - 3. East Karakoram Range
  - 4. Dhauladhar Range

Question ID : 9895807523  
Chosen Option : 4

Q.5  
0 The Union Budget 2018 allocated ₹ 5,750 crore to \_\_\_\_\_.

- Ans
- 1. Operation Green
  - 2. the Ujjwala Yojana
  - 3. the Saubhagya Yojna
  - 4. the National Livelihood Mission

Question ID : 9895807512  
Chosen Option : 3

Q.5  
1 Study the following table carefully to answer the questions given below.

Marks obtained by three students A,B and C in three subjects out of 100			
Student	Subjects		
	Math	Sci	Eng
A	88	86	66
B	65	74	78
C	72	68	84

The total marks obtained by 'A' in all the subjects together is:

- Ans
- 1. 260
  - 2. 240
  - 3. 228
  - 4. 242

Question ID : 9895807851  
Chosen Option : 2

Q.5  
2

Study the following table carefully to answer the questions given below.

Marks obtained by three students A,B and C in three subjects out of 100			
Student	Subjects		
	Math	Sci	Eng
A	88	86	66
B	65	74	78
C	72	68	84

What is the difference between A's and C's total marks in the exam?

- Ans
- 1. 15
  - 2. 13
  - 3. 16
  - 4. 22

Question ID : 9895807852  
Chosen Option : 3

Q.5  
3 If a man cuts the grass of a lawn in T minutes, what part of the lawn can he cut in 30 minutes?

- Ans
- 1. T/30
  - 2. T-30
  - 3. 30-T
  - 4. 30/T

Question ID : 9895807844  
Chosen Option : 4

Q.5  
4 The base area of a cuboid is 34 sq cm. and height is 3.5 cm. What is the volume of cuboid?

- Ans
- 1. 125 cm<sup>3</sup>
  - 2. 97 cm<sup>3</sup>
  - 3. 119 cm<sup>3</sup>
  - 4. 108 cm<sup>3</sup>

Question ID : 9895807848  
Chosen Option : 3

Q.5  
5 The value of  $\frac{1}{3} + \frac{6}{7} \div \frac{6}{3} + \frac{8}{9} - \frac{2}{3} \times \frac{4}{3}$  is:

- Ans
- 1.  $\frac{16}{21}$
  - 2.  $\frac{17}{21}$

3.  $\frac{15}{21}$

4.  $\frac{9}{21}$

Question ID : 9895807829

Chosen Option : 2

Q.5  
6 Sixty percent of the rats included in a particular experiment were female rats. If some of the rats died during the experiment and 30% of rats died were male, what was the ratio of the death rate among the male rats to the death rate among the female rats?

Ans  1. 3 : 4

2. 9 : 14

3. 9 : 16

4. 6 : 7

Question ID : 9895807835

Chosen Option : 2

Q.5  
7 What should come in place of question mark (?) in the following questions?

$$(140 + 80 \times 2 - 24) \div (80 + 20 \times 3 - 40) = ?$$

Ans  1. 276

2. -27.6

3. 2.76

4. 0.276

Question ID : 9895807830

Chosen Option : 3

Q.5  
8 What is the fourth proportional to 3, 7 and 15?

Ans  1. 30

2. 45

3. 35

4. 25

Question ID : 9895807839

Chosen Option : 3

Q.5  
9 A sum of ₹ 5000 is invested for two years under compound interest at 10% p.a, interest being compounded annually. The interest earned (in ₹) is:

Ans  1. 2100

2. 1000

3. 1050

4. 500

Question ID : 9895807842



Q.6  
0 A train passes the platform in 18 seconds and a man standing on the platform in 8 seconds. If the length of the train is 100 metres, the length of the platform is:

- Ans
- 1. 125 m
  - 2. 140 m
  - 3. 150 m
  - 4. 130 m

Question ID : 9895807845

Chosen Option : 1

Q.6  
1 John travels  $\frac{2}{3}$ rd of a distance by bike and remaining 6 km on foot. How many km does he travel in the whole journey?

- Ans
- 1. 28 km
  - 2. 18 km
  - 3. 26 km
  - 4. 14 km

Question ID : 9895807846

Chosen Option : 2

Q.6  
2 Virat Kohli has a certain batting average of 9 innings. In the tenth innings he scored 106 runs thereby increasing his average by 6 runs. His new batting average is:

- Ans
- 1. 48
  - 2. 56
  - 3. 52
  - 4. 46

Question ID : 9895807831

Chosen Option : 3

Q.6  
3 Study the following table carefully to answer the questions given below.

Marks obtained by three students A,B and C in three subjects out of 100			
Student	Subjects		
	Math	Sci	Eng
A	88	86	66
B	65	74	78
C	72	68	84

The average marks obtained by all the students in Maths is:

- Ans
- 1. 79
  - 2. 87

3. 81

4. 75

Question ID : 9895807850

Chosen Option : 4

Q.6 If the length of a rectangle is increased in the ratio 4 : 5 and its breadth is decreased in the ratio 3 : 2, then its area will be decreased in the ratio \_\_\_\_\_

Ans  1. 2 : 1

2. 4 : 3

3. 10 : 3

4. 6 : 5

Question ID : 9895807849

Chosen Option : 4

Q.6 If  $\frac{a}{b} = \frac{2}{3}$ , then the value of  $(5a^3 - 2a^2b) : (3ab^2 - b^3)$  is :

Ans  1. 16 : 27

2. 32 : 29

3. 34 : 19

4. 27 : 16

Question ID : 9895807840

Chosen Option : 1

Q.6 In what proportion must a grocer mix one kind of bajra at ₹ 45 per kg with another at ₹ 32 per kg in order that by selling the mixture at ₹ 48 per kg he may make a profit of 20%?

Ans  1. 4 : 1

2. 8 : 5

3. 7 : 5

4. 9 : 5

Question ID : 9895807838

Chosen Option : 2

Q.6 A sum of ₹ 10000 is lent partly at 8% and remaining at 10% per annum. If the yearly interest on the average is 9.2%, then both parts are respectively.

Ans  1. ₹ 5500 and ₹ 4500

2. ₹ 4500 and ₹ 5500

3. ₹ 5000 and ₹ 5000

4. ₹ 4000 and ₹ 6000

Question ID : 9895807841

Chosen Option : 4

Q.6

8 The marked price of a bike is ₹ 33,600. The retailer announced a discount of 16% on the occasion of Holi. What amount a customer will have to pay for the bike?

Ans 1. ₹ 28224

2. ₹ 5376

3. ₹ 5976

4. ₹ 20224

Question ID : 9895807833

Chosen Option : 1

Q.6  
9 What is the L.C.M. of  $\frac{10}{21}$ ,  $\frac{20}{63}$ ,  $\frac{55}{56}$  ?

Ans  1.  $\frac{5}{7}$

2.  $\frac{220}{7}$

3.  $\frac{220}{504}$

4.  $\frac{5}{504}$

Question ID : 9895807828

Chosen Option : 3

Q.7  
0 The speed of train in going from Bhopal to Varanasi is 100 kmph while when coming back from Varanasi to Bhopal, its speed is 80 kmph. What is the average speed during the whole journey? (correct to two decimal places)

Ans  1. 78.56 kmph

2. 88.89 kmph

3. 86.53 kmph

4. 90.52 kmph

Question ID : 9895807832

Chosen Option : 1

Q.7  
1 By selling 20 metres of cloth, a man gains the selling price of 4 metres of cloth. The gain percent is:

Ans 1. 15 %

2. 20 %

3. 22 %

4. 25 %

Question ID : 9895807837

Chosen Option : 2

Q.7 A person purchases a silk cloth of length 50 m and width 1 m at the rate of ₹ 250 per sq m and a cotton cloth of length 2 40 m and width 2m at the rate of ₹ 200 per sq m. What is the difference between the prices of two cloths?

- Ans
- 1. ₹ 4100
  - 2. ₹ 3200
  - 3. ₹ 3950
  - 4. ₹ 3500

Question ID : 9895807847  
Chosen Option : 4

Q.7 A dice is rolled two times. Find the probability of getting a composite number on first roll and a prime number on 3 second roll?

- Ans
- 1.  $\frac{1}{2}$
  - 2.  $\frac{1}{6}$
  - 3.  $\frac{1}{9}$
  - 4.  $\frac{1}{4}$

Question ID : 9895807834  
Chosen Option : 2

Q.7 A pipe can fill a cistern in 20 minutes whereas the cistern when full can be emptied by a leak in 28 minutes. When both 4 are opened, the time taken to fill the cistern is:

- Ans
- 1. 48 min
  - 2. 70 min
  - 3. 80 min
  - 4. 60 min

Question ID : 9895807843  
Chosen Option : 2

Q.7 Ram buys articles at 70 for ₹ 890 and sold at 60 for ₹ 890. What is his gain percent? 5

- Ans
- 1.  $17\frac{1}{3}\%$
  - 2. 25%
  - 3. 20%
  - 4.  $16\frac{2}{3}\%$

Question ID : 9895807836  
Chosen Option : 1

Q.1 Select the wrongly spelt word.

- Ans
- 1. Committee
  - 2. Corruption
  - 3. Concious
  - 4. Completely

Question ID : 9895808738  
Chosen Option : 4

Q.2 Select the meaning of the given idiom.

Bring to one's knees

- Ans
- 1. to force to submit
  - 2. to trouble someone
  - 3. to request to bend
  - 4. to support someone

Question ID : 9895808734  
Chosen Option : 1

Q.3 Select the word which means the same as the group of words given.

A person who is recovering after an illness or medical treatment

- Ans
- 1. Athlete
  - 2. Convalescent
  - 3. Healthy
  - 4. Altruist

Question ID : 9895808736  
Chosen Option : 3

Q.4 Select the antonym of the given word.

RELUCTANT

- Ans
- 1. Unenthusiastic
  - 2. Opposed
  - 3. Unwilling
  - 4. Willing

Question ID : 9895808732  
Chosen Option : 4

Q.5 Select the most appropriate option to substitute the underlined segment in the given sentence. If there is no need to substitute it, select No substitution required.

The two sisters look quite different in each other.

- Ans
- 1. different as each other
  - 2. No substitution required
  - 3. different with one another
  - 4. different from each other

Question ID : 9895808719  
Chosen Option : 3

Q.6 Select the most appropriate option to substitute the underlined segment in the given sentence. If there is no need to substitute it, select No substitution required.

Our meals usually have at least one item make of some kinds of grain.

- Ans
- 1. No substitution required
  - 2. making of any kinds
  - 3. made of some kind
  - 4. makes of kind

Question ID : 9895808718  
Chosen Option : 1

Q.7 Select the meaning of the given idiom.

Cool as Cucumber

- Ans
- 1. to be smart
  - 2. to be aggressive
  - 3. to be calm
  - 4. to be clever

Question ID : 9895808733  
Chosen Option : 4

Q.8 Select the synonym of the given word.

MADNESS

- Ans
- 1. Wisdom
  - 2. Stability
  - 3. Insanity
  - 4. Balance

Question ID : 9895808730  
Chosen Option : 1

Q.9

Select the antonym of the given word.

LAMENT

- Ans  1. Regret  
 2. Rejoice  
 3. Grieve  
 4. Mourn

Question ID : 9895808731

Chosen Option : 3

Q.1 Identify the segment in the sentence which contains the grammatical error from the given options.  
0

The thin wire that giving off light is called the filament.

- Ans  1. light is called  
 2. The thin wire  
 3. giving off  
 4. the filament

Question ID : 9895808716

Chosen Option : 4

Q.1 Identify the segment in the sentence which contains the grammatical error from the given options.  
1

The jute plant is normal harvested when it is at flowering stage.

- Ans  1. The jute plant  
 2. when it is  
 3. flowering  
 4. is normal

Question ID : 9895808717

Chosen Option : 2

Comprehension:

In the following passage some words have been deleted. Fill in the blanks with the help of the alternatives given. Select the most appropriate option for each number.

Those of us who live in (1) \_\_\_\_\_ covered with forests and surrounded (2) \_\_\_\_\_ hills may find it difficult to (3) \_\_\_\_\_ what a desert is really like. The (4) \_\_\_\_\_ belief is that it is (5) \_\_\_\_\_ endless stretch of sand where no rain falls and, therefore, no vegetation grows.

SubQuestion No : 12

Q.1 Select the most appropriate option that will fill in the blank number 1.  
2

- Ans  1. quarters  
 2. territory  
 3. regions  
 4. cities

Question ID : 9895808724  
Chosen Option : 4

**Comprehension:**

In the following passage some words have been deleted. Fill in the blanks with the help of the alternatives given. Select the most appropriate option for each number.

Those of us who live in (1) \_\_\_\_\_ covered with forests and surrounded (2) \_\_\_\_\_ hills may find it difficult to (3) \_\_\_\_\_ what a desert is really like. The (4) \_\_\_\_\_ belief is that it is (5) \_\_\_\_\_ endless stretch of sand where no rain falls and, therefore, no vegetation grows.

SubQuestion No : 13

Q.1  
3 Select the most appropriate option that will fill in the blank number 2.

- Ans  1. by  
 2. for  
 3. from  
 4. with

Question ID : 9895808725  
Chosen Option : 1

**Comprehension:**

In the following passage some words have been deleted. Fill in the blanks with the help of the alternatives given. Select the most appropriate option for each number.

Those of us who live in (1) \_\_\_\_\_ covered with forests and surrounded (2) \_\_\_\_\_ hills may find it difficult to (3) \_\_\_\_\_ what a desert is really like. The (4) \_\_\_\_\_ belief is that it is (5) \_\_\_\_\_ endless stretch of sand where no rain falls and, therefore, no vegetation grows.

SubQuestion No : 14

Q.1  
4 Select the most appropriate option that will fill in the blank number 3.

- Ans  1. feel  
 2. imagine  
 3. look



4. calculate

Question ID : 9895808726  
Chosen Option : 1

**Comprehension:**

In the following passage some words have been deleted. Fill in the blanks with the help of the alternatives given. Select the most appropriate option for each number.

Those of us who live in (1) \_\_\_\_\_ covered with forests and surrounded (2) \_\_\_\_\_ hills may find it difficult to (3) \_\_\_\_\_ what a desert is really like. The (4) \_\_\_\_\_ belief is that it is (5) \_\_\_\_\_ endless stretch of sand where no rain falls and, therefore, no vegetation grows.

SubQuestion No : 15

Q.1  
5 Select the most appropriate option that will fill in the blank number 4.

- Ans
- 1. popular
  - 2. fake
  - 3. attractive
  - 4. noted

Question ID : 9895808727  
Chosen Option : 2

**Comprehension:**

In the following passage some words have been deleted. Fill in the blanks with the help of the alternatives given. Select the most appropriate option for each number.

Those of us who live in (1) \_\_\_\_\_ covered with forests and surrounded (2) \_\_\_\_\_ hills may find it difficult to (3) \_\_\_\_\_ what a desert is really like. The (4) \_\_\_\_\_ belief is that it is (5) \_\_\_\_\_ endless stretch of sand where no rain falls and, therefore, no vegetation grows.

SubQuestion No : 16

Q.1  
6 Select the most appropriate option that will fill in the blank number 5.

- Ans
- 1. the
  - 2. a
  - 3. no article needed
  - 4. an

Question ID : 9895808728  
Chosen Option : 1

Q.1 Identify the segment in the sentence which contains the grammatical error from the given options.  
7

Seeds of mustard plants give us oil and the leave are used as a vegetable.

- Ans
1. Seeds of
  2. give us oil
  3. leave are used
  4. as a vegetable

Question ID : 9895808715  
Chosen Option : 3

Q.1 Select the word which means the same as the group of words given.  
8

Someone who wishes to destroy the existing government and laws

- Ans
1. Anarchist
  2. Pacifist
  3. Patriot
  4. Hermit

Question ID : 9895808735  
Chosen Option : 2

Q.1 Select the most appropriate option to substitute the underlined segment in the given sentence. If there is no need to substitute it, select No substitution required.  
9

Tea leaves is separate from the liquid with a strainer, while preparing tea.

- Ans
1. are separated from
  2. No substitution required
  3. was separate to
  4. were separating to

Question ID : 9895808720  
Chosen Option : 1

Q.2 Select the most appropriate word to fill in the blank.  
0

Among the \_\_\_\_\_ kinds, the most common ant is black or red.

- Ans
1. separate
  2. much
  3. lots of
  4. various

Question ID : 9895808721  
Chosen Option : 4

Q.2  
1 Select the most appropriate word to fill in the blank.

I was astounded at his \_\_\_\_\_ knowledge about the continent of Africa.

- Ans
- 1. Colossal
  - 2. Grave
  - 3. Massive
  - 4. Vast

Question ID : 9895808739  
Chosen Option : 3

Q.2  
2 Select the most appropriate word to fill in the blank.

The \_\_\_\_\_ of the minister's statement cannot be verified by people who have no access to official records.

- Ans
- 1. validity
  - 2. rejection
  - 3. approval
  - 4. ambiguity

Question ID : 9895808740  
Chosen Option : 3

Q.2  
3 Select the most appropriate word to fill in the blank.

This seems to be a \_\_\_\_\_ rifle.

- Ans
- 1. soldier'
  - 2. soldiers
  - 3. soldier
  - 4. soldier's

Question ID : 9895808722  
Chosen Option : 4

Q.2  
4 Select the synonym of the given word.

LUCID

- Ans
- 1. Ambiguous
  - 2. Confusing
  - 3. Clear
  - 4. Unclear

Question ID : 9895808729  
Chosen Option : 4

Q.2  
5 Select the wrongly spelt word.

- Ans  1. Secretary  
 2. Scenary  
 3. Surely  
 4. Sergeant

Question ID : 9895808737  
Chosen Option : 4

Section : Hindi Language

Q.1 रिक्त स्थान को भरने के लिए उपयुक्त शब्द का चयन करें।

लगता है आज \_\_\_\_\_ होगी।

- Ans  1. दिन  
 2. वर्षा  
 3. बादल  
4. सूर्य

Question ID : 9895806952  
Chosen Option : --

Q.2 'डकार जाना' मुहावरे का अर्थ है-

- Ans  1. कठिन काम  
 2. हानि उठाना  
 3. हड़प लेना  
4. खुलेआम कहना

Question ID : 9895806964  
Chosen Option : --

Q.3 रिक्त स्थान को भरने के लिए उपयुक्त शब्द का चयन करें।

आजकल चोरों \_\_\_\_\_ गिरोह सक्रिय है।

- Ans  1. को  
 2. से  
 3. पर  
 4. का

Question ID : 9895806949  
Chosen Option : --

Q.4

दिए गए शब्द के पर्यायवाची शब्द का चयन करें।

खग

- Ans
- 1. पशु
  - 2. कबूतर
  - 3. तोता
  - 4. पक्षी

Question ID : 9895806961

Chosen Option : --

Q.5 दिए गए वाक्य में रेखांकित खंड को प्रतिस्थापित करने के लिए उपयुक्त विकल्प का चयन करें।

उसकी शिकायत पूर्णतया सही थी।

- Ans
- 1. प्रतिशब्द
  - 2. अधिकतम
  - 3. अक्षरशः
  - 4. लगभग

Question ID : 9895806947

Chosen Option : --

Q.6 दिए गए वाक्य का वह भाग ज्ञात करें जिसमें कोई त्रुटि है।

श्याम की खराब स्थिति को देखकर मुझे दुःख और क्षोभ हुए।

- Ans
- 1. मुझे दुःख
  - 2. खराब स्थिति को देखकर
  - 3. और क्षोभ हुए।
  - 4. श्याम की

Question ID : 9895806944

Chosen Option : --

Q.7 रिक्त स्थान को भरने के लिए उपयुक्त शब्द का चयन करें।

एक विद्वान ने परीक्षा की \_\_\_\_\_ आग से की है।

- Ans
- 1. तुल्य
  - 2. अपेक्षा
  - 3. उपेक्षा
  - 4. तुलना

Q.8 दिए गए शब्द के पर्यायवाची शब्द का चयन करें।

विपत्ति

- Ans
1. मुसीबत
  2. जटा
  3. कष्ट
  4. जटिल

Q.9 दिए गए वाक्य का वह भाग ज्ञात करें जिसमें कोई त्रुटि है।

कक्षा के सभी छात्र गुरु जी की आदर करते हैं।

- Ans
1. कक्षा के
  2. गुरु जी की आदर
  3. सभी छात्र
  4. करते हैं।

Q.10 दिए गए वाक्य में रेखांकित खंड को प्रतिस्थापित करने के लिए उपयुक्त विकल्प का चयन करें।

जीवन में उन्नति चाहते हो तो परिश्रम करो।

- Ans
1. अग्रसर
  2. उच्चता
  3. विकास
  4. अग्रगण्य

Q.11 दिये गये वाक्यांश के लिए एक शब्द दीजिये।

रास्ता दिखाने वाला

- Ans
1. राहपथिक
  2. मार्गदर्शक
  3. दूरदर्शी

✓ 4. समदर्शी

Question ID : 9895806965  
Chosen Option : --

Q.1  
2 दिए गए वाक्य का वह भाग ज्ञात करें जिसमें कोई त्रुटि है।

यदि आप अपनी और अपनी परिवार की भलाई चाहते हो तो यहाँ से चले जाओ।

- Ans
1. तो यहाँ से चले जाओ।
  - ✗ 2. और अपनी परिवार की
  3. भलाई चाहते हो
  - ✓ 4. यदि आप अपनी

Question ID : 9895806945  
Chosen Option : --

Q.1  
3 'अठखेलियाँ सूझना' मुहावरे का अर्थ है-

- Ans
- ✗ 1. व्यंग्य करना
  - ✓ 2. दिल्लगी करना
  - ✗ 3. मजाक उड़ाना
  4. ईर्ष्या करना

Question ID : 9895806963  
Chosen Option : --

Q.1  
4 दिए गए शब्द का विलोम चुनें।

मांसाहारी

- Ans
- ✓ 1. बलिहारी
  - ✗ 2. शाकाहारी
  - ✗ 3. निरंकारी
  - ✗ 4. निराहार

Question ID : 9895806960  
Chosen Option : --

Q.1  
5 सही वर्तनी वाले शब्द का चयन करें।

- Ans
- ✗ 1. साक्षार
  - ✗ 2. शाक्षर
  - ✓ 3. साक्षर

✗ 4. सक्षर

Question ID : 9895806967

Chosen Option : --

Q.1  
6 दिये गये वाक्यांश के लिए एक शब्द दीजिये।

तीव्र बुद्धि वाला

Ans

✗ 1. अल्पबुद्धि

2. दुर्बुद्धि

3. मंदबुद्धि

4. कुशाग्रबुद्धि

Question ID : 9895806966

Chosen Option : --

Q.1  
7 'शाश्वत' का विलोम शब्द है-

Ans

✗ 1. क्षणिक

✗ 2. स्वस्थ

✓ 3. चिरंतन

✗ 4. अस्थायी

Question ID : 9895806959

Chosen Option : --

Q.1  
8 रिक्त स्थान को भरने के लिए उपयुक्त शब्द का चयन करें।

मैं पौधे \_\_\_\_\_ रहा हूँ।

Ans

✗ 1. खा

✗ 2. जगा

✓ 3. लगा

✗ 4. भगा

Question ID : 9895806951

Chosen Option : --

Q.1  
9 दिए गए वाक्य में रेखांकित खंड को प्रतिस्थापित करने के लिए उपयुक्त विकल्प का चयन करें।

जिसने मन रूपी मृतवाले हाथों को वश में कर लिया वही सच्चा शूरवीर है।

Ans

1. उद्विग्न

✗ 2. व्याकुल



3. मदमस्त

4. आकुल

Question ID : 9895806948

Chosen Option : --

Comprehension:

निम्नलिखित गद्यांश के रिक्त स्थानों की पूर्ति गद्यांश के नीचे दिए गए प्रश्नों के अनुसार कीजिए-

किताबें हमारी सबसे अच्छी \_\_\_\_\_ (1) हैं। किताबें आत्मा और मन के लिए भोजन हैं। पुस्तकें हमारे दुखों में हमें \_\_\_\_\_ (2) दे सकती हैं और जीवन की चिंताओं को भूलने में मदद कर सकती हैं। ये जीवन में \_\_\_\_\_ (3) का रहस्य सिखाती हैं। ये जीवन के अंधेरे में \_\_\_\_\_ (4) दिखाती हैं। ये हमें सिखाती हैं कि बुराई पर अच्छाई की \_\_\_\_\_ (5) होती है।

SubQuestion No : 20

Q.2  
0 गद्यांश में संकेतित रिक्त स्थान (1) के लिए उपयुक्त शब्द होगा।

Ans 1. सहकर्मी

2. दुश्मन

3. सहपाठी

4. दोस्त

Question ID : 9895806954

Chosen Option : --

Comprehension:

निम्नलिखित गद्यांश के रिक्त स्थानों की पूर्ति गद्यांश के नीचे दिए गए प्रश्नों के अनुसार कीजिए-

किताबें हमारी सबसे अच्छी \_\_\_\_\_ (1) हैं। किताबें आत्मा और मन के लिए भोजन हैं। पुस्तकें हमारे दुखों में हमें \_\_\_\_\_ (2) दे सकती हैं और जीवन की चिंताओं को भूलने में मदद कर सकती हैं। ये जीवन में \_\_\_\_\_ (3) का रहस्य सिखाती हैं। ये जीवन के अंधेरे में \_\_\_\_\_ (4) दिखाती हैं। ये हमें सिखाती हैं कि बुराई पर अच्छाई की \_\_\_\_\_ (5) होती है।

SubQuestion No : 21

Q.2  
1 गद्यांश में संकेतित रिक्त स्थान (2) के लिए उपयुक्त शब्द होगा।

Ans

- 1. वेदना
- 2. अशांति
- 3. सांत्वना
- 4. तकलीफ

Question ID : 9895806955  
Chosen Option : --

Comprehension:

निम्नलिखित गद्यांश के रिक्त स्थानों की पूर्ति गद्यांश के नीचे दिए गए प्रश्नों के अनुसार कीजिए-

किताबें हमारी सबसे अच्छी \_\_\_\_\_ (1) हैं। किताबें आत्मा और मन के लिए भोजन हैं। पुस्तकें हमारे दुखों में हमें \_\_\_\_\_ (2) दे सकती हैं और जीवन की चिंताओं को भूलने में मदद कर सकती हैं। ये जीवन में \_\_\_\_\_ (3) का रहस्य सिखाती हैं। ये जीवन के अंधेरे में \_\_\_\_\_ (4) दिखाती हैं। ये हमें सिखाती हैं कि बुराई पर अच्छाई की \_\_\_\_\_ (5) होती है।

SubQuestion No : 22

Q.2  
2 गद्यांश में संकेतित रिक्त स्थान (3) के लिए उपयुक्त शब्द होगा।

- Ans
- 1. दरिद्रता
  - 2. विफलता
  - 3. निष्फलता
  - 4. सफलता

Question ID : 9895806956  
Chosen Option : --

Comprehension:

निम्नलिखित गद्यांश के रिक्त स्थानों की पूर्ति गद्यांश के नीचे दिए गए प्रश्नों के अनुसार कीजिए-

किताबें हमारी सबसे अच्छी \_\_\_\_\_ (1) हैं। किताबें आत्मा और मन के लिए भोजन हैं। पुस्तकें हमारे दुखों में हमें \_\_\_\_\_ (2) दे सकती हैं और जीवन की चिंताओं को भूलने में मदद कर सकती हैं। ये जीवन में \_\_\_\_\_ (3) का रहस्य सिखाती हैं। ये जीवन के अंधेरे में \_\_\_\_\_ (4) दिखाती हैं। ये हमें सिखाती हैं कि बुराई पर अच्छाई की \_\_\_\_\_ (5) होती है।

SubQuestion No : 23

Q.2  
3

गद्यांश में संकेतित रिक्त स्थान (4) के लिए उपयुक्त शब्द होगा।

Ans

- 1. रोशनी
- 2. भ्रम
- 3. भय
- 4. आशंका

Question ID : 9895806957

Chosen Option : --

Comprehension:

निम्नलिखित गद्यांश के रिक्त स्थानों की पूर्ति गद्यांश के नीचे दिए गए प्रश्नों के अनुसार कीजिए-

किताबें हमारी सबसे अच्छी \_\_\_\_\_ (1) हैं। किताबें आत्मा और मन के लिए भोजन हैं। पुस्तकें हमारे दुखों में हमें \_\_\_\_\_ (2) दे सकती हैं और जीवन की चिंताओं को भूलने में मदद कर सकती हैं। ये जीवन में \_\_\_\_\_ (3) का रहस्य सिखाती हैं। ये जीवन के अंधेरे में \_\_\_\_\_ (4) दिखाती हैं। ये हमें सिखाती हैं कि बुराई पर अच्छाई की \_\_\_\_\_ (5) होती है।

SubQuestion No : 24

Q.2  
4

गद्यांश में संकेतित रिक्त स्थान (5) के लिए उपयुक्त शब्द होगा।

Ans

- 1. विजय
- 2. विजेता
- 3. अजय
- 4. पराजय

Question ID : 9895806958

Chosen Option : --

Q.2  
5

सही वर्तनी वाले शब्द का चयन करें।

Ans

- 1. दीवास
- 2. दिवश
- 3. दीवस
- 4. दिवस

Question ID : 9895806968

Chosen Option : --

## Constable (GD) in CAPFs, NIA, SSF and Rifleman (GD) in Assam Rifles Examination, 2018

Roll No. :	
Registration No.	
Name :	
Exam Venue :	
Exam Time :	12:30 PM - 2:00 PM
Exam Date :	06/03/2019

Section : General Section

**Q.1** Six kids are sitting in two rows facing north. Their names are Fuji, Ukain, Yam and Krish, Charlie, Mac. Fuji and Mac are sitting diagonally opposite. Ukain is in the top row and to the immediate right of Fuji. Krish is second to the left of Mac while Yam and Krish are not in the same row.

Who is sitting opposite to Charlie?

- Ans
- 1. Yam
  - 2. Fuji
  - 3. Ukain
  - 4. Krish

Question ID : 9895808624  
Chosen Option : 4

**Q.2** Choose the option that most closely resembles the mirror image of the given figure when mirror is placed at right side.

Question Figure:



- Ans
- 1.
  - 2.
  - 3.
  - 4.

Question ID : 9895808637  
Chosen Option : 4

**Q.3** Select the option that is related to the third term in the same way as the second term is related to the first term.

MATE : NATE :: FATE : ?

- Ans
- 1. CATE
  - 2. LATE
  - 3. JATE
  - 4. UATE

Question ID : 9895808620

Chosen Option : 2

Q.4 Select the option that is related to the third term in the same way as the second term is related to the first term.

Day : Night :: Morning : \_\_\_\_\_

- Ans  1. Evening  
 2. Air  
 3. Planet  
 4. Star

Question ID : 9895808619

Chosen Option : 1

Q.5 M, N, O and P are playing cards sitting opposite each other. M is on the right of N and P is on the left of O. Then which of the following are partners?

- Ans  1. N and P  
 2. M and P  
 3. M and N  
 4. P and O

Question ID : 9895808625

Chosen Option : 1

Q.6 Four words have been given out of which three are alike in some manner, while one is different. Choose the odd one.

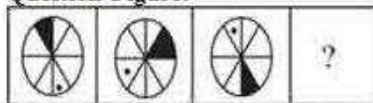
- Ans  1. Bag  
 2. Wheelbarrow  
 3. Basket  
 4. Bowl





Question ID : 9895808617

Chosen Option : 1

Q.7 Choose the option which completes the given figure series.

Question Figure:

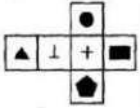


- Ans  1.   
 2.   
 3.   
 4. 

Question ID : 9895808634

Chosen Option : 1

Q.8 The following figure is folded to form a box. Which symbol will appear on the opposite side of ▲ ?



- Ans
- 1. ⊥
  - 2. ■
  - 3. +
  - 4. ●

Question ID : 9895808638

Chosen Option : 1

Q.9 Eight people A, B, C, D, E, F, G and H are sitting around a circular table. A and B are facing towards the centre while the other six people are facing opposite the centre. A is sitting second to the right of H. B sits third to the left of A. D sits second to the right of G. G is neither immediate neighbor of B nor A. E and F are immediate neighbors and are facing outside.

Who is sitting second to the left of G?

- Ans
- 1. F
  - 2. D
  - 3. B
  - 4. C

Question ID : 9895808623

Chosen Option : 1

Q.1 In a certain code, SACK is coded as RZBJ, then how is AMOUNT coded in the same way?

- Ans
- 1. ZLNTMS
  - 2. ZLNSMT
  - 3. ZLTNMS
  - 4. ZLNMST

Question ID : 9895808621

Chosen Option : 1

Q.1 If B is coded as 2, F is coded as 8, C is coded as 4, G is coded as 3, H is coded as 0, A is coded as 1, and N is coded as 7, then what is the coded form of HNCGB?

- Ans
- 1. 07243
  - 2. 07423
  - 3. 07432
  - 4. 04237

Question ID : 9895808622

Chosen Option : 3

Q.1  
2

Find the missing number from the below options.

72	18
54	
64	?
38	

- Ans  1. 24  
 2. 26  
 3. 18  
 4. 22

Question ID : 9895808632  
 Chosen Option : 2

Q.1 The statements below are followed by two conclusions labeled I and II. Assuming that the information in the statements is true, even if it appears to be at variance with generally established facts, decide which conclusion(s) logically and definitely follow(s) from the information given in the statements.

Statements:

All Strong are animals.  
 Some animals are Tigers.  
 All Tigers are Sharp.

Conclusions:

I. Some Strong are Sharp.  
 II. No Strong is Sharp.

- Ans  1. Only conclusion II follows  
 2. Either conclusion I or II follows  
 3. Only conclusion I follows  
 4. Neither conclusion I nor II follows

Question ID : 9895808627  
 Chosen Option : 4

Q.1 Select the option that is related to the Third term in the same way as the second term is related to the first term.

13 : 196 :: 9 : ?

- Ans  1. 121  
 2. 100  
 3. 131  
 4. 111

Question ID : 9895808630  
 Chosen Option : 2

Q.1 Select the correct option that will fill in the blank and complete the series.

18, 36, 108, 432, 2160, \_\_\_\_\_

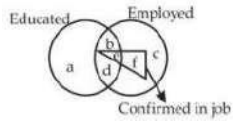
- Ans  1. 15200  
 2. 14200  
 3. 12960  
 4. 12690

Question ID : 9895808628

Chosen Option : 3

Q.1 Read the given figure and find the region representing persons who are educated and employed but not confirmed in job.

6



- Ans
- 1. ac
  - 2. abc
  - 3. bd
  - 4. adc

Question ID : 9895808639

Chosen Option : 3

Q.1 Select the option that is related to the third term in the same way as the second term is related to the first term.

7

India : Country :: Delhi : \_\_\_\_\_

- Ans
- 1. Continent
  - 2. District
  - 3. Capital
  - 4. Red Fort

Question ID : 9895808618

Chosen Option : 3

Q.1 Four options have been given out of which three are alike in some manner, while one is different. Choose the odd one.

8

- Ans
- 1. 36-59
  - 2. 61-34
  - 3. 51-24
  - 4. 32-41

Question ID : 9895808631

Chosen Option : 4

Q.1 Choose the option figure in which the problem figure is hidden/embedded.

9

Question Figure:



- Ans
- 1.
  - 2.
  - 3.
  - 4.



Question ID : 9895808636  
Chosen Option : 3

Q.2  
0 Select the correct option that will fill in the blank and complete the series.

52, 56, 65, 81, 106, \_\_\_\_\_

- Ans
- 1. 122
  - 2. 142
  - 3. 132
  - 4. 140

Question ID : 9895808629  
Chosen Option : 2

Q.2  
1 Select the correct option that will fill in the blank and complete the series.

T, R, P, N, L, \_\_\_\_\_, \_\_\_\_\_

- Ans
- 1. K, H
  - 2. K, I
  - 3. J, G
  - 4. J, H

Question ID : 9895808615  
Chosen Option : 4

Q.2  
2 Which of the following answer figure will complete the given figure?

Question Figure:



- Ans
- 1.
  - 2.
  - 3.
  - 4.

Question ID : 9895808635  
Chosen Option : 1

Q.2  
3 Four letter clusters have been given out of which three are alike in some manner, while one is different. Choose the odd one.

- Ans
- 1. MPQS
  - 2. RUVX

3. FIJL

4. GHJK

Question ID : 9895808616  
Chosen Option : 4

Q.2 Select the correct combination of mathematical signs to replace\*\* signs and to balance the given equation.

4

$$32 * 8 * 14 * 7 * 16$$

Ans  1.  $\times - + =$

2.  $+ = \div \times$

3.  $- \times \div =$

4.  $\div \times - =$

Question ID : 9895808633  
Chosen Option : 3

Q.2 The statements below are followed by conclusions labeled I, II and III. Assuming that the information in the statements is true, even if it appears to be at variance with generally established facts, decide which conclusion(s) logically and definitely follow(s) from the information given in the statements.

5

**Statements:**

All twenty are thirty.

All thirty are forty.

All forty are sixty.

All sixty are seventy.

**Conclusions:**

I. Some forty are thirty.

II. Some seventy are sixty.

III. No thirty is twenty.

Ans  1. Only II and III follow

2. Only I and III follow

3. Only I and II follow

4. All, I, II and III follow

Question ID : 9895808626  
Chosen Option : 3

Q.2 What is deposited on iron in the process of Galvanization?

6

Ans  1. aluminium

2. tin

3. zinc

4. copper

Question ID : 9895808480  
Chosen Option : 3

Q.2 Which of the following options is a martial arts form associated with Tamil Nadu?

7

Ans  1. Kalari Payattu

2. Thoda

3. Thang-ta

4. Silambam

Question ID : 9895808468

Chosen Option : 1

Q.2 What is grown as a kharif crop in the northern and rabi crop in the southern part of India?

8

Ans  1. Mustard

2. Sesamum

3. Linseed

4. Groundnut

Question ID : 9895808485

Chosen Option : 4

Q.2 Which element is used for making solar cells?

9

Ans  1. Silicon

2. Sulphur

3. Sodium

4. Silver

Question ID : 9895808483

Chosen Option : 4

Q.3 Which event is marked as an Intangible Cultural Heritage of Humanity by UNESCO?

0

Ans  1. Suraj Kund Mela

2. Tarnetar Mela

3. Kumbh Mela

4. Pushkar Mela

Question ID : 9895808465

Chosen Option : 3

Q.3 The soil ideal for growing cotton is:

1

Ans  1. arid soil

2. laterite soil

3. alluvial soil

4. black soil

Question ID : 9895808484

Chosen Option : 3

Q.3 Who is the founder of Grameen Bank?

2

Ans  1. Abdullah Abu Sayed

2. Anu Muhammad

3. Muhammad Yunus

4. Atiur Rahman

Question ID : 9895808473  
Chosen Option : 3

Q.3  
3 Which gas shields the surface of the earth from ultraviolet radiation from the sun?

- Ans
- 1. Oxygen
  - 2. Carbon dioxide
  - 3. Ozone
  - 4. Nitrogen

Question ID : 9895808482  
Chosen Option : 3

Q.3  
4 Which organization is under the Ministry of Statistics, Planning and Programme Implementation?

- Ans
- 1. Central Survey Organisation
  - 2. National Sample Survey Organisation
  - 3. Central Sample Survey Organisation
  - 4. National Survey Organisation

Question ID : 9895808475  
Chosen Option : 3

Q.3  
5 Who directed the film 'Bhuvan Shome'?

- Ans
- 1. Satyajit Ray
  - 2. Ritwik Ghatak
  - 3. Mrinal Sen
  - 4. Buddhadeb Dasgupta

Question ID : 9895808472  
Chosen Option : 2

Q.3  
6 Tooth decay starts when the pH of our mouth is:

- Ans
- 1. higher than 7.5
  - 2. higher than 5.5
  - 3. higher than 6.5
  - 4. lower than 5.5

Question ID : 9895808479  
Chosen Option : 1

Q.3  
7 In which state is Vishwa Mitra Ka Tila situated?

- Ans
- 1. Haryana
  - 2. Punjab
  - 3. Uttaranchal
  - 4. Rajasthan

Question ID : 9895808466

Chosen Option : 2

Q.3  
8 Any section of citizens with a distinct language or culture have a right to \_\_\_\_\_ it.

- Ans
- 1. Annihilate
  - 2. Squander
  - 3. Conserve
  - 4. Uproot

Question ID : 9895808478  
Chosen Option : 2

Q.3  
9 The Imperial Forest Research Institute was set up in 1906 in:

- Ans
- 1. Bangalore
  - 2. Dehradun
  - 3. Almora
  - 4. Bhopal

Question ID : 9895808488  
Chosen Option : 2

Q.4  
0 On which river is the Hirakud Dam situated?

- Ans
- 1. Kaveri
  - 2. Mahanadi
  - 3. Sutlej
  - 4. Bhagirathi

Question ID : 9895808486  
Chosen Option : 3

Q.4  
1 Who was the world's first woman amputee to climb Mount Vinson?

- Ans
- 1. Arunima Sinha
  - 2. Santosh Yadav
  - 3. Premlata Agarwal
  - 4. Bachendri Pal

Question ID : 9895808469  
Chosen Option : 4

Q.4  
2 The magazine in which Mahatma Gandhi mentioned what he wanted the Constitution to do is:

- Ans
- 1. Young India
  - 2. Oriental Magazine
  - 3. Navajivan
  - 4. Harijan

Question ID : 9895808477  
Chosen Option : 2

Q.4  
3 Which award is given for contribution towards national integration?

- Ans  1. Sardar Patel Award  
 2. Tilak Award  
 3. Gita Chopra Award  
 4. Rajiv Gandhi Award

Question ID : 9895808470  
Chosen Option : 1

Q.4  
4 A \_\_\_\_\_ is a formal document containing an order of the court to the Government issued only by the High Court or the Supreme Court of India.

- Ans  1. Writ  
 2. Covenant  
 3. Claim  
 4. Summon

Question ID : 9895808476  
Chosen Option : 4

Q.4  
5 Who has been conferred with the rank of the Commander of the Order of the British Empire in 2018?

- Ans  1. Rajinder Rai  
 2. Nitin Sawhney  
 3. Talvin Singh  
 4. Tjinder Singh

Question ID : 9895808467  
Chosen Option : 3

Q.4  
6 Who was the first one to use a glass prism to obtain the spectrum of sunlight?

- Ans  1. Albert Einstein  
 2. James Clerk Maxwell  
 3. Isaac Newton  
 4. Hans Christian Oersted

Question ID : 9895808481  
Chosen Option : 3

Q.4  
7 When goods are produced by exploiting natural resources, it is an activity associated with:

- Ans  1. primary sector  
 2. service sector  
 3. secondary sector  
 4. tertiary sector

Question ID : 9895808474  
Chosen Option : 3

Q.4  
8

Ans

- 1. intensive cultivation
- 2. taungya cultivation
- 3. shifting cultivation
- 4. extensive cultivation

Question ID : 9895808489  
Chosen Option : 1

Q.4  
9 The book "In my mother's house" is written by \_\_\_\_\_.

- Ans
- 1. Nihal De Silva
  - 2. Rajiva Wijesinha
  - 3. Sharika Thiranagama
  - 4. Shyam Selvadurai

Question ID : 9895808471  
Chosen Option : 4

Q.5  
0 Which goods from India dominated the international textile markets before the age of mechanised industries?

- Ans
- 1. Woollen goods
  - 2. Silk and cotton goods
  - 3. Silk goods
  - 4. Cotton goods

Question ID : 9895808487  
Chosen Option : 4

Q.5  
1 The length and breadth of a painting is 15 cm and 10 cm respectively. A 1 cm wide boarder is made around the painting.

What is the area of boarder?

- Ans
- 1. 45 sq cm.
  - 2. 60 sq cm.
  - 3. 54 sq cm.
  - 4. 16 sq cm.

Question ID : 9895808685  
Chosen Option : 3

Q.5  
2 A student gets 60% of the maximum marks. If he gets 50% more than the passing mark, then the passing mark is-what percentage of the maximum marks?

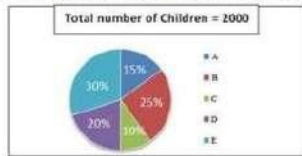
- Ans
- 1. 37.5%
  - 2. 50%
  - 3. 40%
  - 4. 75%

Question ID : 9895808672  
Chosen Option : 1

Q.5  
3

Study the following pie-charts carefully to answer the questions.

Percentage break-up of number of children in five different villages



If 70 percent children from village D go to school then what is the number of children attending school from village D ?

Ans

1. 360
2. 400
3. 320
4. 280

Question ID : 9895808688

Chosen Option : 4

Q.5 A frog was, at the bottom of a 80 m deep well. It attempted to come out of it by jumping. In each jump it covered 1.15 m but slipped down by 0.75 m. The number of jumps after which it would out of the well is:

Ans

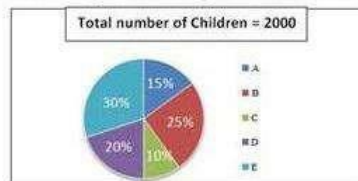
1. 199
2. 200
3. 198
4. 201

Question ID : 9895808680

Chosen Option : 2

Q.5 Study the following pie-charts carefully to answer the questions.

Percentage break-up of number of children in five different villages



What is the respective ratio of total number of children from village A to village C ?

Ans

1. 3:5
2. 2:3
3. 1:3
4. 3:2

Question ID : 9895808687

Chosen Option : 1

Q.5 Two bottles A and B contain diluted acid. In bottle A, the amount of water is double the amount of acid while in bottle B, the amount of acid is 3 times that of water. How much mixture (in litres) should be taken from each bottle A and B respectively in order to prepare 5 liters diluted acid containing equal amount of acid and water?

Ans

1. 1,4
2. 4,1
3. 3,2
4. 2,3



Question ID : 9895808676  
Chosen Option : 3

Q.5 Which of the following schemes of computing interest yields the maximum interest for a year?

7

Ans  1. Interest compounded monthly at 2% per month.

2.

Interest compounded every six months at 12% for every-6 months

3. Interest compounded per quarter 6% per quarter.

4. Interest compounded every year at 24%.p.a.

Question ID : 9895808679  
Chosen Option : 2

Q.5 In how many years will a sum of money become sixteen times itself at 30% p.a. simple interest?

8

Ans  1. 30

2. 50

3. 40

4. 25

Question ID : 9895808678  
Chosen Option : 2

Q.5 The average of 50 number is 36. If two numbers, namely 63 and 65 are discarded, the average of the remaining numbers is (Correct to two decimal places)

9

Ans  1. 32.50

2. 36.50

3. 33.75

4. 34.83

Question ID : 9895808668  
Chosen Option : 2

Q.6 What should come in place of question mark (?) in the following questions?

0

$$383 \div 25 \times 2.5 + 12 = ?$$

Ans  1. 124.24

2. 68.30

3. 50.30

4. 222.14

Question ID : 9895808666  
Chosen Option : 4

Q.6 Two trains running in opposite directions cross a man standing on the platform in 25 seconds and 32 seconds respectively and they cross each other in 30 seconds. The ratio of their speed is:

1

Ans  1. 5 : 6

2. 1 : 3

3. 4 : 3

4. 2 : 5

Question ID : 9895808682

Chosen Option : 1

Q.6  
2 The smallest perfect square number divisible by each of 6 and 12 is:

- Ans
- 1. 144
  - 2. 196
  - 3. 36
  - 4. 108

Question ID : 9895808665

Chosen Option : 2

Q.6  
3 The numbers of visitors every hour in a shop from 1 p.m. to 8 p.m. on Monday were recorded as 7, 10, 15, 22, 6, 4 and 13. The arithmetic mean of visitors is:

- Ans
- 1. 13
  - 2. 11
  - 3. 10
  - 4. 9

Question ID : 9895808671

Chosen Option : 2

Q.6  
4 What is the perpendicular distance (in cm) between the parallel sides of a trapezium whose area is 108 sq cm. and the lengths of the parallel sides are 9 cm and 36 cm?

- Ans
- 1. 7 cm
  - 2. 3.6 cm
  - 3. 6 cm
  - 4. 4.8 cm

Question ID : 9895808684

Chosen Option : 3

Q.6  
5 A dealer allows his customers a discount of 25% and still gains 25%. If an article costs ₹1600 to the dealer, then its marked price (nearest to one rupee) is:

- Ans
- 1. ₹2000
  - 2. ₹2667
  - 3. ₹2050
  - 4. ₹2600

Question ID : 9895808670

Chosen Option : 1

Q.6  
6 The average age of Indian cricket team playing in the Capetown test match is 28 years. If the average age of 10 player besides the captain is 27.8 years, then the age of the Captain is:

- Ans
- 1. 31 Years
  - 2. 30 Years
  - 3. 26 Years
  - 4. 25 Years

Question ID : 9895808669

Chosen Option : 1

Q.6  
7 Rohit and Dinesh are 64 km apart. Rohit can walk at a speed of 15 km/hr and Dinesh at the speed of 17 km/hr. In how many hours will they meet if they are travelling towards each other?

- Ans
1. 1.5 hour
  2. 2.5 hour
  3. 3 hour
  4. 2 hour

Question ID : 9895808683

Chosen Option : 2

Q.6  
8 What should come in place of question mark (?) in the following questions?

$$1.5 \times 78 \div 0.5 = ?$$

- Ans
1. 234
  2. 238
  3. 216
  4. 243

Question ID : 9895808667

Chosen Option : 1

Q.6  
9 A can do a certain job in 12 days. B is 60% more efficient than A. To do the same job B alone would take?

- Ans
1. 7 days
  2.  $7\frac{1}{2}$  days
  3. 10 days
  4. 8 days

Question ID : 9895808681

Chosen Option : 4

Q.7  
0 Oranges are purchased at the rate of 7 oranges for ₹3. At what price one hundred oranges should be sold so that the profit is 33%?

- Ans
1. ₹58
  2. ₹60
  3. ₹56
  4. ₹57

Question ID : 9895808674

Chosen Option : 2

Q.7  
1 The third proportional to 9 and 15 is:

- Ans
1. 27
  2. 25

3. 36

4. 18

Question ID : 9895808675  
Chosen Option : 3

Q.7  
2 Yashwant buys candies at 15 for ₹40 and sells them at 30 for ₹50. What is his gain or loss percent?

- Ans
1. 37.5% Loss
  2. 37.5% Profit
  3. 36 % Profit
  4. 40 % Loss

Question ID : 9895808673  
Chosen Option : 3

Q.7  
3 Find the total surface area of a cube whose volume is  $64 \text{ cm}^3$ .

- Ans
1.  $84 \text{ cm}^2$
  2.  $64 \text{ cm}^2$
  3.  $16 \text{ cm}^2$
  4.  $96 \text{ cm}^2$

Question ID : 9895808686  
Chosen Option : 3

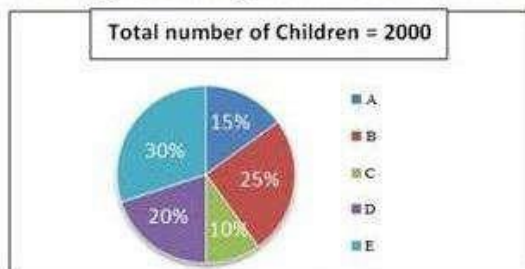
Q.7  
4 If  $\frac{a}{b} = \frac{7}{9}$ ,  $\frac{b}{c} = \frac{3}{5}$  then the value of a : b : c is

- Ans
1. 7:3:15
  2. 21:27:42
  3. 7:9:5
  4. 7:9:15

Question ID : 9895808677  
Chosen Option : 3

Q.7  
5 Study the following pie-charts carefully to answer the questions.

Percentage break-up of number of children in five different villages



What is the total number of children in villages B and E ?

- Ans
1. 1100
  2. 1400

3. 1200

4. 1145

Question ID : 9895808689  
Chosen Option : 1

Section : English Language

Q.1 Select the most appropriate word to fill in the blank.

Some tribes have rich and unique cultural traditions, \_\_\_\_\_ their own language.

Ans  1. including

2. inclusive

3. include

4. included

Question ID : 9895808747  
Chosen Option : --

Q.2 Select the antonym of the given word.

FACILITATE

Ans  1. Aid

2. Hinder

3. Comfort

4. Ease

Question ID : 9895808758  
Chosen Option : --

Q.3 Identify the segment in the sentence which contains the grammatical error from the given options.

People's demand are ever growing but the availability of land is limited.

Ans  1. ever growing

2. is limited

3. People's demand

4. availability of

Question ID : 9895808742  
Chosen Option : --

Q.4 Select the most appropriate word to fill in the blank.

The unemployment problem, as \_\_\_\_\_ by people, is not severe among the educated women.

Ans  1. solved

2. demanded

3. decided

4. perceived

Question ID : 9895808765  
Chosen Option : --

Q.5 Select the meaning of the given idiom.

Call it a day

- Ans
- 1. a nightmare
  - 2. an unending dream
  - 3. name a day
  - 4. time to quit

Question ID : 9895808759

Chosen Option : --

Q.6 Select the synonym of the given word.

Valiant

- Ans
- 1. Frightened
  - 2. Enthusiastic
  - 3. Scared
  - 4. Courageous

Question ID : 9895808756

Chosen Option : --

Q.7 Select the word which means the same as the group of words given.

One who can easily be deceived/cheated

- Ans
- 1. Modest
  - 2. Veteran
  - 3. Gullible
  - 4. Prudent

Question ID : 9895808762

Chosen Option : --

Q.8 Select the most appropriate option to substitute the underlined segment in the given sentence. If there is no need to substitute it, select No substitution required.

Amoeba is a microscopic single-celled organism found in pond water.

- Ans
- 1. organism found with
  - 2. organisms finds in
  - 3. No substitution required
  - 4. organisms find in

Question ID : 9895808746

Chosen Option : --

Q.9 Identify the segment in the sentence which contains the grammatical error from the given options.

It was in the oceans that life begins almost 3.5 billion years ago.

- Ans
- 1.

2. It was
3. life begins
4. in the oceans

Question ID : 9895808743

Chosen Option : --

Q.1 Select the most appropriate option to substitute the underlined segment in the given sentence. If there is no need to substitute it, select No substitution required.

Water and minerals presented to the soil are absorbed by the roots.

- Ans  1. No substitution required
2. present for the soil
3. presented at the soil
4. present in the soil

Question ID : 9895808744

Chosen Option : --

#### Comprehension:

In the following passage some words have been deleted. Fill in the blanks with the help of the alternatives given. Select the most appropriate option for each number.

Advertisements (1) \_\_\_\_\_ our attention to various products and describe (2) \_\_\_\_\_ positively so that we become (3) \_\_\_\_\_ in buying them. Advertising is all (4) \_\_\_\_\_ building brands. At a very basic level, 'branding' means (5) \_\_\_\_\_ a product with a particular name or sign.

SubQuestion No : 11

Q.1 Select the most appropriate option that will fill in the blank number 1.

- Ans  1. pull
2. turn
3. draw
4. hook

Question ID : 9895808750

Chosen Option : --

#### Comprehension:

In the following passage some words have been deleted. Fill in the blanks with the help of the alternatives given. Select the most appropriate option for each number.

Advertisements (1) \_\_\_\_\_ our attention to various products and describe (2) \_\_\_\_\_ positively so that we become (3) \_\_\_\_\_ in buying them. Advertising is all (4) \_\_\_\_\_ building brands. At a very basic level, 'branding' means (5) \_\_\_\_\_ a product with a particular name or sign.

SubQuestion No : 12

Q.1  
2

Select the most appropriate option that will fill in the blank number 2.

- Ans
- 1. themselves
  - 2. them
  - 3. they
  - 4. it

Question ID : 9895808751

Chosen Option : --

**Comprehension:**

In the following passage some words have been deleted. Fill in the blanks with the help of the alternatives given. Select the most appropriate option for each number.

Advertisements (1) \_\_\_\_\_ our attention to various products and describe (2) \_\_\_\_\_ positively so that we become (3) \_\_\_\_\_ in buying them. Advertising is all (4) \_\_\_\_\_ building brands. At a very basic level, 'branding' means (5) \_\_\_\_\_ a product with a particular name or sign.

**SubQuestion No : 13**

Q.1  
3 Select the most appropriate option that will fill in the blank number 3.

- Ans
- 1. biased
  - 2. touched
  - 3. partial
  - 4. interested

Question ID : 9895808752

Chosen Option : --

**Comprehension:**

In the following passage some words have been deleted. Fill in the blanks with the help of the alternatives given. Select the most appropriate option for each number.

Advertisements (1) \_\_\_\_\_ our attention to various products and describe (2) \_\_\_\_\_ positively so that we become (3) \_\_\_\_\_ in buying them. Advertising is all (4) \_\_\_\_\_ building brands. At a very basic level, 'branding' means (5) \_\_\_\_\_ a product with a particular name or sign.

**SubQuestion No : 14**

Q.1  
4 Select the most appropriate option that will fill in the blank number 4.

- Ans
- 1. in
  - 2. across
  - 3. for
  - 4. about

Question ID : 9895808753

Chosen Option : --



**Comprehension:**

In the following passage some words have been deleted. Fill in the blanks with the help of the alternatives given. Select the most appropriate option for each number.

Advertisements (1) \_\_\_\_\_ our attention to various products and describe (2) \_\_\_\_\_ positively so that we become (3) \_\_\_\_\_ in buying them. Advertising is all (4) \_\_\_\_\_ building brands. At a very basic level, 'branding' means (5) \_\_\_\_\_ a product with a particular name or sign.

**SubQuestion No : 15**

Q.1  
5 Select the most appropriate option that will fill in the blank number 5.

- Ans
- 1. sticking
  - 2. stamping
  - 3. posing
  - 4. molding

Question ID : 9895808754  
Chosen Option : --

Q.1  
6 Select the wrongly spelt word.

- Ans
- 1. Neccessary
  - 2. Discipline
  - 3. Consensus
  - 4. Occasion

Question ID : 9895808763  
Chosen Option : --

Q.1  
7 Select the most appropriate word to fill in the blank.

\_\_\_\_\_ many people lived in the cities, others living in the countryside grew crops.

- Ans
- 1. Among
  - 2. About
  - 3. While
  - 4. Whether

Question ID : 9895808748  
Chosen Option : --

Q.1  
8 Select the meaning of the given idiom.

Piping hot

- Ans
- 1. Lukewarm
  - 2. Extremely angry
  - 3. Steaming hot
  - 4. Not too hot

Question ID : 9895808760  
Chosen Option : --

Q.1  
9 Select the wrongly spelt word.

- Ans
- 1. Miniscule
  - 2. Milenium
  - 3. Mischievous
  - 4. Minimum

Question ID : 9895808764  
Chosen Option : --

Q.2  
0 Select the most appropriate option to substitute the underlined segment in the given sentence. If there is no need to substitute it, select No substitution required.

Normally bacteria are present in our mouth but it is not harmful to us.

- Ans
- 1. No substitution required
  - 2. and it is not
  - 3. but they are not
  - 4. so they are not

Question ID : 9895808745  
Chosen Option : --

Q.2  
1 Identify the segment in the sentence which contains the grammatical error from the given options.

Time and technology are two important factors that which change substances into resources.

- Ans
- 1. Time and technology
  - 2. into resources
  - 3. two important factors
  - 4. that which change

Question ID : 9895808741  
Chosen Option : --

Q.2  
2 Select the most appropriate word to fill in the blank.

In his address to the villagers the minister \_\_\_\_\_ certain measures being taken for improving their quality of life.

- Ans
- 1. learnt
  - 2. highlighted
  - 3. staged
  - 4. stepped

Question ID : 9895808766  
Chosen Option : --

Q.2  
3 Select the word which means the same as the group of words given.

One who knows everything

- Ans
- 1.

2. Omniscient  
 3. Incredible  
 4. Omnipotent

Question ID : 9895808761  
 Chosen Option : --

Q.2  
4 Select the antonym of the given word.

CRITICIZE

- Ans  1. Respect  
 2. Censure  
 3. Condemn  
 4. Commend

Question ID : 9895808757  
 Chosen Option : --

Q.2  
5 Select the synonym of the given word.

REMORSE

- Ans  1. Regret  
 2. Delight  
 3. Joy  
 4. Solace

Question ID : 9895808755  
 Chosen Option : --

Section : Hindi Language

Q.1 दिए गए वाक्य में रेखांकित खंड को प्रतिस्थापित करने के लिए उपयुक्त विकल्प का चयन करें।

प्राचार्य महोदय ने उसे घर जाने की अनुमति प्रदान कर दी।

- Ans  1. अनुज्ञा  
 2. प्रज्ञा  
 3. आज्ञा  
 4. अवज्ञा

Question ID : 9895806973  
 Chosen Option : 3

Q.2 दिए गए वाक्य में रेखांकित खंड को प्रतिस्थापित करने के लिए उपयुक्त विकल्प का चयन करें।

विष्णु के अनेक अभिधान हैं।

- Ans  1. नाम  
 2. धाम  
 3. रूप  
 4. लीला

Question ID : 9895806972

Chosen Option : 1

Q.3 दिए गए शब्द का विलोम चुनें।

अल्पायु

- Ans
- 1. अजर
  - 2. दयालु
  - 3. दीर्घायु
  - 4. घायल

Question ID : 9895806986

Chosen Option : 3

Q.4 रिक्त स्थान को भरने के लिए उपयुक्त शब्द का चयन करें।

26 जनवरी का दिन हमारे देशवासियों के लिए \_\_\_\_\_ पर्व है।

- Ans
- 1. आध्यात्मिक
  - 2. धार्मिक
  - 3. राष्ट्रीय
  - 4. सामाजिक

Question ID : 9895806977

Chosen Option : 3

Q.5 दिए गए वाक्य का वह भाग ज्ञात करें जिसमें कोई त्रुटि है।

मनुष्य का आवश्यकताओं के लिए तो बहुत कुछ है परंतु उसके लोभ के लिए कुछ भी नहीं है।

- Ans
- 1. तो बहुत कुछ है
  - 2. कुछ भी नहीं है।
  - 3. परंतु उसके लोभ के लिए
  - 4. मनुष्य का आवश्यकताओं के लिए

Question ID : 9895806970

Chosen Option : 4

Q.6 सही वर्तनी वाले शब्द का चयन करें।

- Ans
- 1. अभियस्थ
  - 2. अभ्यस्त
  - 3. अभयस्थ
  - 4. अभयस्थ

Question ID : 9895806994

Chosen Option : 2

Q.7

दिये गये वाक्यांश के लिए एक शब्द दीजिये।

व्याकरण जानने वाला

- Ans
- 1. वैयाकरण
  - 2. दार्शनिक
  - 3. आचार्य
  - 4. काव्यशास्त्री

Question ID : 9895806991  
Chosen Option : 1

Q.8 'कमल' का पर्यायवाची शब्द है-

- Ans
- 1. जलज
  - 2. फूल
  - 3. सुरभि
  - 4. कनक

Question ID : 9895806988  
Chosen Option : 2

Q.9 रिक्त स्थान को भरने के लिए उपयुक्त शब्द का चयन करें।

बड़े दुख की बात है \_\_\_\_\_ आप जैसे स्नेही मित्र के घर भी मैं विवाह के अवसर पर न आ सका।

- Ans
- 1. हम
  - 2. मैं
  - 3. आत्मीय
  - 4. कि

Question ID : 9895806975  
Chosen Option : 4

Q.1 0 दिए गए शब्द का विलोम चुनें।

आत्मघात

- Ans
- 1. आत्मरक्षा
  - 2. आत्मज्ञान
  - 3. आत्मबल
  - 4. आत्मविश्वास

Question ID : 9895806985  
Chosen Option : 4

Comprehension:

निम्नलिखित गद्यांश के रिक्त स्थानों की पूर्ति गद्यांश के नीचे दिए गए प्रश्नों के अनुसार कीजिए-

विश्व पर्यावरण दिवस हर साल 5 जून को पूरे विश्व में पर्यावरण सुरक्षा हेतु जनता में \_\_\_\_\_ (1) का प्रसार करने के लिए मनाया जाता है। भारत सरकार पर्यावरण को सुधारने के लिए काफी अभियान \_\_\_\_\_ (2) है। हाल ही में स्वच्छ भारत \_\_\_\_\_ (3) शुरू किया गया है। सरकार के साथ साथ \_\_\_\_\_ (4) आदमी को भी प्रण लेना चाहिए की वो वातावरण को साफ रखे। छोटी सी \_\_\_\_\_ (5) से हम अपने और अपने आस-पास के वातावरण को साफ रख सकते हैं।

SubQuestion No : 11

Q.1  
1 गद्यांश में संकेतित रिक्त स्थान (1) के लिए उपयुक्त शब्द होगा।

- Ans
- 1. जागरूकता
  - 2. स्वाधीनता
  - 3. समानता
  - 4. अज्ञानता

Question ID : 9895806980  
Chosen Option : 1

Comprehension:

निम्नलिखित गद्यांश के रिक्त स्थानों की पूर्ति गद्यांश के नीचे दिए गए प्रश्नों के अनुसार कीजिए-

विश्व पर्यावरण दिवस हर साल 5 जून को पूरे विश्व में पर्यावरण सुरक्षा हेतु जनता में \_\_\_\_\_ (1) का प्रसार करने के लिए मनाया जाता है। भारत सरकार पर्यावरण को सुधारने के लिए काफी अभियान \_\_\_\_\_ (2) है। हाल ही में स्वच्छ भारत \_\_\_\_\_ (3) शुरू किया गया है। सरकार के साथ साथ \_\_\_\_\_ (4) आदमी को भी प्रण लेना चाहिए की वो वातावरण को साफ रखे। छोटी सी \_\_\_\_\_ (5) से हम अपने और अपने आस-पास के वातावरण को साफ रख सकते हैं।

SubQuestion No : 12

Q.1  
2 गद्यांश में संकेतित रिक्त स्थान (2) के लिए उपयुक्त शब्द होगा।

- Ans
- 1. चलाती
  - 2. मनाती
  - 3. बताती
  - 4. सजाती

Question ID : 9895806981  
Chosen Option : 1

Comprehension:

निम्नलिखित गद्यांश के रिक्त स्थानों की पूर्ति गद्यांश के नीचे दिए गए प्रश्नों के अनुसार कीजिए-

विश्व पर्यावरण दिवस हर साल 5 जून को पूरे विश्व में पर्यावरण सुरक्षा हेतु जनता में \_\_\_\_\_ (1) का प्रसार करने के लिए मनाया जाता है। भारत सरकार पर्यावरण को सुधारने के लिए काफी अभियान \_\_\_\_\_ (2) है। हाल ही में स्वच्छ भारत \_\_\_\_\_ (3) शुरू किया गया है। सरकार के साथ साथ \_\_\_\_\_ (4) आदमी को भी प्रण लेना चाहिए की वो वातावरण को साफ़ रखे। छोटी सी \_\_\_\_\_ (5) से हम अपने और अपने आस-पास के वातावरण को साफ़ रख सकते हैं।

SubQuestion No : 13

Q.1  
3 गद्यांश में संकेतित रिक्त स्थान (3) के लिए उपयुक्त शब्द होगा।

- Ans
- 1. उत्सव
  - 2. अभिमान
  - 3. मनोरंजन
  - 4. अभियान

Question ID : 9895806982  
Chosen Option : 4

Comprehension:

निम्नलिखित गद्यांश के रिक्त स्थानों की पूर्ति गद्यांश के नीचे दिए गए प्रश्नों के अनुसार कीजिए-

विश्व पर्यावरण दिवस हर साल 5 जून को पूरे विश्व में पर्यावरण सुरक्षा हेतु जनता में \_\_\_\_\_ (1) का प्रसार करने के लिए मनाया जाता है। भारत सरकार पर्यावरण को सुधारने के लिए काफी अभियान \_\_\_\_\_ (2) है। हाल ही में स्वच्छ भारत \_\_\_\_\_ (3) शुरू किया गया है। सरकार के साथ साथ \_\_\_\_\_ (4) आदमी को भी प्रण लेना चाहिए की वो वातावरण को साफ़ रखे। छोटी सी \_\_\_\_\_ (5) से हम अपने और अपने आस-पास के वातावरण को साफ़ रख सकते हैं।

SubQuestion No : 14

Q.1  
4 गद्यांश में संकेतित रिक्त स्थान (4) के लिए उपयुक्त शब्द होगा।

- Ans
- 1. आम
  - 2. गरीब
  - 3. अमीर
  - 4. खास

Question ID : 9895806983  
Chosen Option : 4

## Comprehension:

निम्नलिखित गद्यांश के रिक्त स्थानों की पूर्ति गद्यांश के नीचे दिए गए प्रश्नों के अनुसार कीजिए-

विश्व पर्यावरण दिवस हर साल 5 जून को पूरे विश्व में पर्यावरण सुरक्षा हेतु जनता में \_\_\_\_\_ (1) का प्रसार करने के लिए मनाया जाता है। भारत सरकार पर्यावरण को सुधारने के लिए काफी अभियान \_\_\_\_\_ (2) है। हाल ही में स्वच्छ भारत \_\_\_\_\_ (3) शुरू किया गया है। सरकार के साथ साथ \_\_\_\_\_ (4) आदमी को भी प्रण लेना चाहिए की वो वातावरण को साफ रखे। छोटी सी \_\_\_\_\_ (5) से हम अपने और अपने आस-पास के वातावरण को साफ रख सकते हैं।

SubQuestion No : 15

Q.1  
5 गद्यांश में संकेतित रिक्त स्थान (5) के लिए उपयुक्त शब्द होगा।

- Ans
- 1. चहल
  - 2. पहल
  - 3. टहल
  - 4. प्रयास

Question ID : 9895806984  
Chosen Option : 4

Q.1  
6 दिए गए वाक्य का वह भाग ज्ञात करें जिसमें कोई वृत्ति है।

में आवश्यक परिस्थितियों की उत्पन्न हो जाने के कारण बैठक में उपस्थित नहीं हो सकता।

- Ans
- 1. परिस्थितियों की उत्पन्न हो जाने के कारण
  - 2. बैठक में
  - 3. उपस्थित नहीं हो सकता।
  - 4. मैं आवश्यक

Question ID : 9895806969  
Chosen Option : 3

Q.1  
7 दिए गए शब्द के पर्यायवाची शब्द का चयन करें।

मृग

- Ans
- 1. हिरण
  - 2. पवन
  - 3. बादल
  - 4. हाथी

Question ID : 9895806987  
Chosen Option : 3

Q.1  
8 'मैदान मारना' मुहावरे का अर्थ है-



- Ans
- 1. संघर्ष करना
  - 2. भाग जाना
  - 3. जमीन नापना
  - 4. लड़ाई जीतना

Question ID : 9895806990  
Chosen Option : 4

Q.1  
9 'बट्टा लगाना' मुहावरे का अर्थ है-

- Ans
- 1. सम्मान होना
  - 2. झूठ बोलना
  - 3. अपमान होना
  - 4. कलंक लगाना

Question ID : 9895806989  
Chosen Option : 4

Q.2  
0 रिक्त स्थान को भरने के लिए उपयुक्त शब्द का चयन करें।

अध्ययन से ज्ञान बढ़ता है, आर्थिक शक्ति मजबूत होती है \_\_\_\_\_ यश प्राप्त होता है।

- Ans
- 1. बहुत
  - 2. और
  - 3. पर्याप्त
  - 4. ढेर-सा

Question ID : 9895806976  
Chosen Option : 2

Q.2  
1 रिक्त स्थान को भरने के लिए उपयुक्त शब्द का चयन करें।

गोपाल आजकल चित्रकला का \_\_\_\_\_ कर रहा है।

- Ans
- 1. प्रयास
  - 2. व्यायाम
  - 3. अभ्यास
  - 4. आयास

Question ID : 9895806978  
Chosen Option : 3

Q.2  
2 दिए गए वाक्य में रेखांकित खंड को प्रतिस्थापित करने के लिए उपयुक्त विकल्प का चयन करें।

जीने का कुछ तो उद्देश्य होना चाहिए।

- Ans
- 1. प्रबोधन
  - 2. साधन
  - 3. प्रयोजन
  - 4. प्रवर्तन

Question ID : 9895806974  
Chosen Option : 2

Q.2  
3 'एक उदर से जन्म' लेने वालों के लिए एक शब्द प्रयुक्त होता है-

- Ans
- 1. समान
  - 2. उत्तम
  - 3. सहोदर
  - 4. पेट

Question ID : 9895806992  
Chosen Option : 3

Q.2  
4 दिए गए वाक्य का वह भाग ज्ञात करें जिसमें कोई त्रुटि है।

तुष्टीकरण की नीति अपनाकर न व्यक्ति आगे बढ़ सकती है और न राष्ट्र।

- Ans
- 1. अपनाकर
  - 2. तुष्टीकरण की नीति
  - 3. और न राष्ट्र।
  - 4. न व्यक्ति आगे बढ़ सकती है

Question ID : 9895806971  
Chosen Option : 4

Q.2  
5 सही वर्तनी वाले शब्द का चयन करें।

- Ans
- 1. सैनीक
  - 2. सेनिक
  - 3. सैनिक
  - 4. सेनीक

Question ID : 9895806993  
Chosen Option : 3

Roll No. :	
Registration No.	
Name :	
Exam Venue :	iON Digital Zone iDZ Sirsakala Bhilai-3
Exam Time :	4:00 PM - 5:30 PM
Exam Date :	06/03/2019

Section : General Section

**Q.1** The statements below are followed by conclusions labeled I, II and III. Assuming that the information in the statements is true, even if it appears to be at variance with generally established facts, decide which conclusion(s) logically and definitely follow(s) from the information given in the statements.

**Statements:**

Some women are weaks.

Some weaks are female.

All female are iron.

All iron are gold.

**Conclusions:**

I. Some weaks are iron.

II. Some gold are weaks.

III. Some women are female.

- Ans**
1. All, I, II and III follow
  2. Only II and III follow
  3. Only I and III follow
  4. Only I and II follow

Question ID : 9895808651

Chosen Option : 4

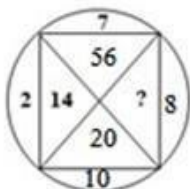
**Q.2** Four options have been given out of which three are alike in some manner, while one is different. Choose the odd one.

- Ans**
1. 125
  2. 75
  3. 729
  4. 1331

Question ID : 9895808656

Chosen Option : 2

**Q.3** Find the missing number from the below options.



- Ans  1. 80  
 2. 70  
 3. 140  
 4. 77

Question ID : 9895808657  
 Chosen Option : 1

Q.4 Select the correct option that will fill in the blank and complete the series.

21, 43, 85, 171, 341, \_\_\_\_\_

- Ans  1. 683  
 2. 675  
 3. 684  
 4. 680

Question ID : 9895808653  
 Chosen Option : 1

Q.5 Four words have been given out of which three are alike in some manner, while one is different. Choose the odd one.

- Ans  1. Robbery  
 2. Snobbery  
 3. Larceny  
 4. Burglary

Question ID : 9895808642  
 Chosen Option : 1

Q.6 Which of the following answer figure will complete the given figure?

Question figure:



- Ans  1.
- 2.
- 3.
- 4.

Question ID : 9895808660  
 Chosen Option : 4

Q.7 Four letter clusters have been given out of which three are alike in some manner, while one is different. Choose the odd one.

- Ans  1. YZBE  
 2.

✓ 3. JKNQ

✗ 4. QRTW

Question ID : 9895808641  
Chosen Option : 3

Q.8 Select the related word pair from the given alternatives.

Afghanistan : Kabul :: \_\_\_\_\_ : \_\_\_\_\_

- Ans ✗ 1. Iran : Dublin  
2. Nepal : Monaco  
3. Pakistan : Islam Nagar  
4. China: Beijing

Question ID : 9895808643  
Chosen Option : 4

Q.9 Find the missing analogous numbers pair :

1000 : 121 ::?

- Ans ✗ 1. 64 : 8  
✓ 2. 125 : 36  
✗ 3. 27 : 64  
✗ 4. 343 : 81

Question ID : 9895808655  
Chosen Option : 2

Q.1 Choose the option figure in which the problem figure is hidden/embedded.

Question figure:



- Ans ✗ 1.
- ✓ 2.
- ✗ 3.
- ✗ 4.

Question ID : 9895808661  
Chosen Option : 2

Select the related word pair from the given alternatives.

Month : Year :: \_\_\_\_\_ : \_\_\_\_\_

- Ans
1. Litre : Liquid
  2. Speed : Vehicle
  3. Time : Distance
  4. Minute : Hour

Question ID : 9895808644  
Chosen Option : 4

Q.1 The statements below are followed by two conclusions labeled I and II. Assuming that the information in the statements  
2 is true, even if it appears to be at variance with generally established facts, decide which conclusion(s) logically and definitely follow(s) from the information given in the statements.

Statements:

Some teaspoons are glasses.

All teddies are teaspoons.

Conclusions:

I. Some teddies are glasses.

II. Some glasses are teddies.

- Ans
1. Either I or II follows
  2. Only conclusion II follows
  3. Only conclusion I follows
  4. Neither I nor II follows

Question ID : 9895808652  
Chosen Option : 4

Q.1 Select the option that is related to the third term in the same way as the second term is related to the first term.

3

GPLS : 54 :: WGSK : \_\_\_\_\_

- Ans
1. 70
  2. 60
  3. 65
  4. 53

Question ID : 9895808645  
Chosen Option : 2

Q.1 In a certain code, NAP is coded as MZO, then how is SNEEZE coded in the same way as:

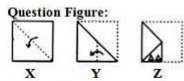
4

- Ans
1. RQDFYG
  2. RMDDYD
  3. RMDFYD
  4. RNDDYD

Question ID : 9895808646  
Chosen Option : 2

Q.1  
5

A piece of paper is folded and cut as shown below in the question figures. From the given answer figures, how will it appear when opened?



Ans

- 1.
- 2.
- 3.
- 4.

Question ID : 9895808663  
Chosen Option : 1

Q.1 Select the correct combination of mathematical signs to replace '\*\*' signs and to balance the given equation:

6

$$54 * 6 * 5 * 14$$

Ans

1.  $+ \div =$
2.  $= \times +$
3.  $- = \times$
4.  $\div + =$

Question ID : 9895808658  
Chosen Option : 4

Q.1 Choose the option that most closely resembles the mirror image of the given figure when mirror is placed at left side.

7



Ans

- 1.
- 2.
- 3.
- 4.

Question ID : 9895808662  
Chosen Option : 2

Q.1 In a class of 35 children, Ameya's rank is sixth from the top. Annie is seven ranks below Ameya. What is Annie's rank from the bottom?

8

Ans

1. 22

2. 20

3. 23

4. 19

Question ID : 9895808650

Chosen Option : 3

Q.1 Select the correct option that will fill in the blank and complete the series.

$$\frac{3}{2}, \frac{5}{2}, \frac{7}{2}, \frac{9}{2}, \frac{11}{2}, ?$$

Ans

1.  $\frac{12}{2}$

2.  $\frac{17}{2}$

3.  $\frac{13}{2}$

4.  $\frac{10}{2}$

Question ID : 9895808654

Chosen Option : 3

Q.2 Six kids are sitting in two rows facing north. Their names are Fuji, Ukain, Yam and Krish, Charlie, Mac. Fuji and Mac are sitting diagonally opposite. Ukain is in the top row and to the immediate right of Fuji. Krish is second to the left of Mac while Yam and Krish are not in the same row.

Who is sitting diagonally opposite to Yam?

Ans

1. Charlie

2. Krish

3. Ukain

4. Mac

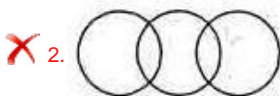
Question ID : 9895808649

Chosen Option : 1

Q.2 Select the Venn diagram that best illustrates the relationship between the three given classes.


Clothes, T-shirt, Trousers

Ans





✗ 4.



Question ID : 9895808664  
Chosen Option : 1

Q.2 Select the correct option that will fill in the blank and complete the series.

FKP, GMQ, HOR, ?

- Ans
- ✓ 1. IQS
  - ✗ 2. IRT
  - ✗ 3. JNK
  - ✗ 4. JYI

Question ID : 9895808640  
Chosen Option : 1

Q.2 If NAMAN is written as 12321 and VINESH as 671489, how will NIMESH be written?

- Ans
- ✗ 1. 174583
  - ✗ 2. 173486
  - ✗ 3. 167893
  - ✓ 4. 173489

Question ID : 9895808647  
Chosen Option : 4

Q.2 Eight people A, B, C, D, E, F, G and H are sitting around a circular table. A and B are facing towards the center while the other six people are facing opposite the center. A is sitting second to the right of H. B sits third to the left of A. D sits second to the right of G. G is neither immediate neighbour of B nor A. E and F are immediate neighbours and are facing outside.

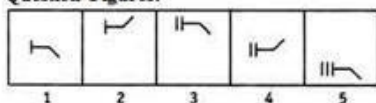
What is the position of C with respect to D?

- Ans
- 1. Third to the right
  - 2. Fourth to the left
  - 3. Fourth to the right
  - 4. Third to the left

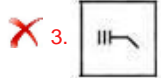
Question ID : 9895808648  
Chosen Option : 1

Q.2 Choose the option which comes next in the given figure series.

Question Figures:



- Ans
- ✗ 1.



Question ID : 9895808659  
Chosen Option : 4

Q.2  
6 Which hormone is secreted by the pituitary gland?

- Ans
- 1. Adrenaline
  - 2. Growth hormone
  - 3. Insulin
  - 4. Thyroxin

Question ID : 9895808508  
Chosen Option : 2

Q.2  
7 Most classical dances of India combine three main facets namely, "Bhava", "Raga" and "\_\_\_\_\_".

- Ans
- 1. Svasara
  - 2. Tala
  - 3. Sopana
  - 4. Mala

Question ID : 9895808492  
Chosen Option : 2

Q.2  
8 National Youth Day is celebrated on the birthday of:

- Ans
- 1. Swami Vivekananda
  - 2. Swami Abhedananda
  - 3. Swami Ashokananda
  - 4. Swami Rajesgwaranand Maharaj

Question ID : 9895808496  
Chosen Option : 1

Q.2  
9 Which of the following reasons for why construction of huge dams is opposed?

- Ans
- 1. They are not cost effective
  - 2. No support in producing hydroelectricity
  - 3. Lack of manual labour
  - 4. Large scale displacement of peasants and tribals

Question ID : 9895808507  
Chosen Option : 4

Q.3  
0 Who has been Honoured with Ashoka Chakra at the 69th Republic Day 2018?

- Ans
1. Hangpan Dada
  2. Mukund Varadarajan
  3. Mohan Goswami
  4. Jyoti Prakash Nirala

Question ID : 9895808495  
Chosen Option : 2

Q.3  
1 How many members were there in the Constituent Assembly that wrote the Indian Constitution?

- Ans
1. 199
  2. 299
  3. 298
  4. 198

Question ID : 9895808501  
Chosen Option : 3

Q.3  
2 Which of the following policy falls under right to work?

- Ans  1.
1. Mahatma Gandhi National Rural Employment Guarantee Act
  2. Ayushman Bharat
  3. Pradhan Mantri Ujjwal Yojna
  4. Saubhagya Scheme

Question ID : 9895808500  
Chosen Option : 1

Q.3  
3 Which of the following sea ports declined after the emergence of East India Company?

- Ans
1. Calcutta
  2. Bombay
  3. Vishakapatnam
  4. Surat

Question ID : 9895808512  
Chosen Option : 3

Q.3  
4 Which type of farming is practiced in areas of high population pressure on land?

- Ans
1. Extensive subsistence farming
  2. Commercial farming
  3. Primitive subsistence farming
  4. Intensive subsistence farming

Question ID : 9895808510  
Chosen Option : 4

Q.3  
5 The festival associated with the worship of the sun, rivers and ponds is:

- Ans  1. Makar Sankranti  
 2. Chhath  
 3. Diwali  
4. Teej

Question ID : 9895808491  
Chosen Option : 4

Q.3  
6 The major economic attribute for comparing countries is their:

- Ans  1. income  
2. human development index  
3. population  
4. mortality rate

Question ID : 9895808499  
Chosen Option : 1

Q.3  
7 On which river is the Bhakra Nangal Dam situated?

- Ans  1. Sutlej  
 2. Ravi  
 3. Jhelum  
 4. Chenab

Question ID : 9895808511  
Chosen Option : 4

Q.3  
8 Detention of political prisoners without trial for two years was a feature of:

- Ans  1. Rowlatt Act  
2. East India Stock Dividend Redemption Act  
3. British India Regulating Act  
 4. Government of India Act

Question ID : 9895808514  
Chosen Option : 1

Q.3  
9 Mushrooms and other micro organisms feed on dead plant and animal tissues and convert them into \_\_\_\_\_.

- Ans  1. Sod  
 2. Peat  
 3. Clod  
 4. Humus

Question ID : 9895808505  
Chosen Option : 3

Q.4  
0 Which of the following Indian artists has been awarded the Lifetime Achievement Grammy Award?

- Ans  1. Zakir Hussain  
 2. A.R Rahman

- 3. Ravi Shankar
- 4. Lata Mangeshkar

Question ID : 9895808497  
Chosen Option : 3

Q.4  
1 Who set up the first iron and steel works in India in 1912 at Jamshedpur?

- Ans
- 1. R. J. Tata
  - 2. R. D. Tata
  - 3. D. J. Tata
  - 4. J. N. Tata

Question ID : 9895808513  
Chosen Option : 4

Q.4  
2 Which Indian state has made solar plants mandatory for housing societies, industries and other specified categories of buildings?

- Ans
- 1. Manipur
  - 2. Himachal Pradesh
  - 3. Nagaland
  - 4. Haryana

Question ID : 9895808509  
Chosen Option : 4

Q.4  
3 In which year was the Prime Minister Rozgar Yojana (PMRY) scheme launched?

- Ans
- 1. 1993
  - 2. 1995
  - 3. 1992
  - 4. 1994

Question ID : 9895808498  
Chosen Option : 4

Q.4  
4 Who is the fastest Asian to traverse the globe riding a bicycle?

- Ans
- 1. Vedangi Kulkarni
  - 2. Rameshwori Devi
  - 3. Mayuri Lute
  - 4. E Chaoba Devi

Question ID : 9895808494  
Chosen Option : 1

Q.4  
5 Which Indian cultural site is NOT included in the World Heritage List?

- Ans
- 1. Humayun's Tomb
  - 2. Red Fort Complex
  - 3. Qutub Minar
  - 4. Jama Masjid

Question ID : 9895808490  
Chosen Option : 1

Q.4  
6 Which gas is flushed in a bag of chips to prevent the chips from getting oxidized?

- Ans
- 1. Oxygen
  - 2. Nitrogen
  - 3. Hydrogen
  - 4. Helium

Question ID : 9895808504  
Chosen Option : 4

Q.4  
7 Dhop is a seasonal game played in:

- Ans
- 1. Meghalaya
  - 2. Nagaland
  - 3. Maharashtra
  - 4. Assam

Question ID : 9895808493  
Chosen Option : 1

Q.4  
8 Who was the founder chairperson of Central Social Welfare Board?

- Ans
- 1. G. Durgabai Deshmukh
  - 2. Aruna Asaf Ali
  - 3. Annie Besant
  - 4. Sarojini Naidu

Question ID : 9895808503  
Chosen Option : 1

Q.4  
9 Which of the following High Courts has the largest number of seats?

- Ans
- 1. Mumbai High Court
  - 2. Kolkata High Court
  - 3. Allahabad High Court
  - 4. Guwahati High Court

Question ID : 9895808502  
Chosen Option : 2

Q.5  
0 Twinkling of stars is due to:

- Ans
- 1. atmospheric reflection
  - 2. scattering of light
  - 3. internal reflection
  - 4. atmospheric refraction

Question ID : 9895808506  
Chosen Option : 4

Q.5  
1 The average age of 3 persons is 30 years. If their ages are in the ratio of 3:5:7 respectively, then the age of the eldest person is:

- Ans
- 1. 25 Years
  - 2. 42 Years
  - 3. 28 Years
  - 4. 21 Years

Question ID : 9895808693  
Chosen Option : 2

Q.5  
2 The L.C.M. of two different numbers are 30. Which of the following cannot be their H.C.F.?

- Ans
- 1. 12
  - 2. 15
  - 3. 6
  - 4. 10

Question ID : 9895808690  
Chosen Option : 1

Q.5  
3 **DIRECTIONS:** What should come in place of question mark (?) in the following questions?

$$1072 + \{[8240 + (-9213)] - \{(2863 - (4329 - 2143))\}\} = ?$$

- Ans
- 1. 578
  - 2. -576
  - 3. 576
  - 4. -578

Question ID : 9895808692  
Chosen Option : 4

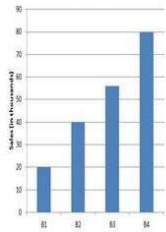
Q.5  
4 On a certain sum, rate of interest per annum for the first two years is 4%. The rate of interest for next four years is 6% and for the next three years is 8%. If total simple interest earned at the end of 9 years is ₹ 1120, then the sum is:

- Ans
- 1. ₹ 2240
  - 2. ₹ 1600
  - 3. ₹ 1800
  - 4. ₹ 2000

Question ID : 9895808703  
Chosen Option : 3

Q.5  
5

Sales of books from four shops (B1, B2, B3, B4) in thousands are given as below. Study the graph and answer the following questions.



If each shop can increase the sales of books by 10%, then the total number of books (in thousands) sold by all the shop are:

- Ans
1. 215.5
  2. 214.5
  3. 240.0
  4. 228.0

Question ID : 9895808714  
Chosen Option : 2

Q.5 If ten men can do a job in ten days, what fraction of the job can be done by one man in one day?

- Ans
1.  $\frac{1}{20}$
  2.  $\frac{1}{10}$
  3.  $\frac{1}{2}$
  4.  $\frac{1}{100}$

Question ID : 9895808705  
Chosen Option : 4

Q.5 In a colony 5 families have 1 child, 7 families have 2 children, 8 families have 3 children and 3 families have 4 children.

7 What is the mode of the number of children.


- Ans
1. 4
  2. 8
  3. 5
  4. 3

Question ID : 9895808696  
Chosen Option : 3

Q.5  
8



Sales of books from four shops (B1, B2, B3, B4) in thousands are given as below. Study the graph and answer the following questions.



The number of shop in which sales of books are below the average level is:

Ans

1. 2

2. 4

3. 1

4. 3

Question ID : 9895808713

Chosen Option : 1

Q.5  
9 What should come in place of question mark (?) in the following questions?

$$? = (45 \times 11) \div 3$$

Ans

1. 162

2. 165

3. 144

4. 235

Question ID : 9895808691

Chosen Option : 2

Q.6  
0 If  $x:y = 2:3$  then the value of  $\frac{3x+2y}{9x+5y}$  will be:

Ans

1.  $\frac{4}{11}$

2.  $\frac{11}{2}$

3.  $\frac{1}{2}$

4.  $\frac{5}{14}$


Question ID : 9895808701

Chosen Option : 1

Q.6

1

Sales of books from four shops (B1, B2, B3, B4) in thousands are given as below. Study the graph and answer the following questions.



The average sales of book from shop B1, B2 and B4 is closest to:

- Ans
1. 43633
  2. 48333
  3. 46666
  4. 46333

Question ID : 9895808712  
Chosen Option : 3

Q.6 The income of A and B are in the ratio 5: 3. The expenses of A, B and C are in the ratio of 8: 5: 2. If C spends 2000 and B saves ₹ 700, then A saves:

- Ans
1. ₹ 1000
  2. ₹ 1500
  3. ₹ 500
  4. ₹ 250

Question ID : 9895808700  
Chosen Option : 2

Q.6 A dealer buys goods at 10% discount on its list price and sells 10% above the list price. His profit percent is:

- Ans
1. 20%
  2.  $22\frac{2}{9}\%$
  3.  $11\frac{11}{9}\%$
  4. 10%

Question ID : 9895808699  
Chosen Option : 2

Q.6 The area of an equilateral triangle is  $16\sqrt{3}$  sq cm. What is its perimeter?

- Ans
1. 16 cm
  2. 12 cm
  3. 24 cm
  4. 32 cm

Question ID : 9895808710  
Chosen Option : 3

Q.6  
5 Rekha sells a DVD player to Liza at a profit of 15% and Liza sells it Megha at a profit of 25%. If Megha pays ₹ 2875 for it, then what was the cost price for Rekha.

- Ans
1. ₹ 1800
  2. ₹ 2000
  3. ₹ 1500
  4. ₹ 1900

Question ID : 9895808698  
Chosen Option : 2

Q.6  
6 If the curved surface area of a sphere increased by 44%, then by what percentage would its volume increase?

- Ans
1. 20%
  2. 44%
  3. Cannot be determined
  4. 72.8%

Question ID : 9895808697  
Chosen Option : 3

Q.6  
7 A customer is given a discount of  $2\frac{1}{2}\%$  on the marked price of an item. He purchased it in ₹ 39. Marked price of the item is:

- Ans
1. ₹ 36.5
  2. ₹ 42
  3. ₹ 40
  4. ₹ 41.5

Question ID : 9895808695  
Chosen Option : 3

Q.6  
8 A Train of 300 m length passes a pole in 15 second. What is the speed of the Train?

- Ans
1. 72 km/hr
  2. 75 km/hr
  3. 65 km/hr
  4. 60 km/hr

Question ID : 9895808708  
Chosen Option : 1

Q.6  
9 Smith travels along four sides of a square at speeds of 10, 12, 15 and 20 km/hr. The average speed of the Smith is:

- Ans
1.  $13\frac{1}{3}$  km/hr
  2.  $12\frac{1}{2}$  km/hr
  3.  $14\frac{1}{4}$  km/hr

4. 10 km/hr

Question ID : 9895808707  
Chosen Option : 3

Q.7  
0 What will be the cost of fencing a circular garden of radius 35 m at the rate of ₹ 16 per meter? (Take  $\pi = \frac{22}{7}$ )

- Ans
- 1. ₹ 3520
  - 2. ₹ 3240
  - 3. ₹ 2850
  - 4. ₹ 3160

Question ID : 9895808711  
Chosen Option : 1

Q.7  
1 A solution of milk and water contains milk and water in the ratio of 3 : 2. Another solution of milk and water contains milk and water in the ratio of 2 : 1. Forty litres of the first solution is mixed with 30 litre of the second solution. The ratio of milk and water in the resultant solution is:

- Ans
- 1. 22 : 13
  - 2. 13 : 22
  - 3. 6 : 5
  - 4. 5 : 6

Question ID : 9895808702  
Chosen Option : 1

Q.7  
2 Had been one man less, then the number of days required to do a piece of work would have been one more. If the number of Man. Days required to complete the work is 56, how many workers were there?

- Ans
- 1. 14
  - 2. 9
  - 3. 6
  - 4. 8

Question ID : 9895808706  
Chosen Option : 1

Q.7  
3 A certain sum becomes ₹ 650 at the end of one year and ₹ 676 at the end of second year. The at compound interest sum is:

- Ans
- 1. ₹ 560
  - 2. ₹ 625
  - 3. ₹ 600
  - 4. ₹ 540

Question ID : 9895808704  
Chosen Option : 1

Q.7  
4 The average temperature on Friday, Saturday and Sunday was  $26^\circ$  and on Saturday, Sunday and Monday it was  $24^\circ$ . If on Monday it was exactly  $25^\circ$ . Then what was the temperature on Friday.

- Ans
- 1.  $33^\circ$
  - 2.  $32^\circ$
  - 3.

✓ 4. 31°

Question ID : 9895808694  
Chosen Option : 4

Q.7 A cylinder of height 4 cm and base radius 3 cm is melted to form a sphere. The radius of sphere is:  
5

- Ans ✓ 1. 3 cm  
✗ 2. 3.5 cm  
✗ 3. 4 cm  
✗ 4. 2.5 cm

Question ID : 9895808709  
Chosen Option : 1

Section : English Language

Q.1 Select the most appropriate option to substitute the underlined segment in the given sentence. If there is no need to substitute it, select No substitution required.

Whenever there is raining, desert flowers bloom and the sight can be rewarding.

- Ans ✓ 1. Whenever it rains  
2. No substitution required  
✗ 3. When its rains  
4. When raining

Question ID : 9895808770  
Chosen Option : 1

Q.2 Select the synonym of the given word.

VAIN

- Ans ✗ 1. Useful  
✓ 2. Useless  
✗ 3. Nutritious  
✗ 4. Beneficial

Question ID : 9895808782  
Chosen Option : 2

Q.3 Select the most appropriate word to fill in the blank.

He offered us \_\_\_\_\_ food items for lunch and we were happy.

- Ans ✓ 1. delicious  
✗ 2. pungent  
✗ 3. lucrative  
4. big

Question ID : 9895808792  
Chosen Option : 1

Q.4

Select the meaning of the given idiom.

Play it safe

- Ans
1. play a game peacefully
  2. play indoors
  3. play for pleasure
  4. avoid risks

Question ID : 9895808786  
Chosen Option : 4

Q.5 Select the most appropriate option to substitute the underlined segment in the given sentence. If there is no need to substitute it, select No substitution required.

As the tree comes crashing down, monkeys woke from its sleep and run from branch to branch.

- Ans
1. wakes from it sleep
  2. woke in their sleep
  3. No substitution required
  4. wake from their sleep

Question ID : 9895808771  
Chosen Option : 4

Q.6 Identify the segment in the sentence which contains the grammatical error from the given options.

We used to keep large plates of fruit on a table nearer a window in the dining-room.

- Ans
1. We used to
  2. nearer a window
  3. on a table
  4. large plates of

Question ID : 9895808769  
Chosen Option : 2

Q.7 Select the most appropriate word to fill in the blank.

The man insisted on buying the doves \_\_\_\_\_ he was fond of birds.

- Ans
1. because
  2. due to
  3. though
  4. as if

Question ID : 9895808774  
Chosen Option : 1

Q.8 Select the wrongly spelt word.

- Ans
1. Perspiration
  2. Paralysis
  3. Plateform

4. Perseverance

Question ID : 9895808790  
Chosen Option : 3

Q.9 Select the meaning of the given idiom.

Draw a Blank

- Ans  1. Unable to remember  
 2. Be an artist  
 3. Lose money  
4. Display skills

Question ID : 9895808785  
Chosen Option : 1

Q.1  
0 Select the most appropriate word to fill in the blank.

We went to see the butterfly farm \_\_\_\_\_ was very close to our hotel.

- Ans  1. It  
 2. Us  
 3. Them  
4. They

Question ID : 9895808773  
Chosen Option : 1

Q.1  
1 Select the most appropriate option to substitute the underlined segment in the given sentence. If there is no need to substitute it, select No substitution required.

The most pleasant way was to going and having a good dinner at some fine restaurant.

- Ans 1. was going to have  
2. No substitution required  
3. is to have gone and eat  
4. was to go and have

Question ID : 9895808772  
Chosen Option : 4

Q.1  
2 Identify the segment in the sentence which contains the grammatical error from the given options.

An ant uses it's feelers or antennae to 'talk' to other ants by passing messages through them.

- Ans 1. to other ants  
2. An ant  
3. it's feelers  
4. Through them

Question ID : 9895808767  
Chosen Option : 3

**Comprehension:**

In the following passage some words have been deleted. Fill in the blanks with the help of the alternatives given. Select the most appropriate option for each number.

The National Aeronautics and Space Administration's (NASA) Viking Mission to Mars was (1) \_\_\_\_\_ of two spacecraft. Viking 1 and Viking 2, (2) \_\_\_\_\_ consisting of an orbiter and (3) \_\_\_\_\_ lander. The primary objectives (4) \_\_\_\_\_ to obtain images and samples (5) \_\_\_\_\_ the Martian surface and soil.

**SubQuestion No : 13**

Q.1  
3 Select the most appropriate option that will fill in the blank number 1.

- Ans
1. composed
  2. making
  3. consist
  4. including

Question ID : 9895808776  
Chosen Option : 1

**Comprehension:**

In the following passage some words have been deleted. Fill in the blanks with the help of the alternatives given. Select the most appropriate option for each number.

The National Aeronautics and Space Administration's (NASA) Viking Mission to Mars was (1) \_\_\_\_\_ of two spacecraft. Viking 1 and Viking 2, (2) \_\_\_\_\_ consisting of an orbiter and (3) \_\_\_\_\_ lander. The primary objectives (4) \_\_\_\_\_ to obtain images and samples (5) \_\_\_\_\_ the Martian surface and soil.

**SubQuestion No : 14**

Q.1  
4 Select the most appropriate option that will fill in the blank number 2.

- Ans
1. both of
  2. one of
  3. equally
  4. each

Question ID : 9895808777  
Chosen Option : 1

**Comprehension:**

In the following passage some words have been deleted. Fill in the blanks with the help of the alternatives given. Select the most appropriate option for each number.

The National Aeronautics and Space Administration's (NASA) Viking Mission to Mars was (1) \_\_\_\_\_ of two spacecraft. Viking 1 and Viking 2, (2) \_\_\_\_\_ consisting of an orbiter and (3) \_\_\_\_\_ lander. The primary objectives (4) \_\_\_\_\_ to obtain images and samples (5) \_\_\_\_\_ the Martian surface and soil.



SubQuestion No : 15

Q.1  
5 Select the most appropriate option that will fill in the blank number 3.

- Ans
- 1. a
  - 2. the
  - 3. an
  - 4. No article required

Question ID : 9895808778  
Chosen Option : 4

Comprehension:

In the following passage some words have been deleted. Fill in the blanks with the help of the alternatives given. Select the most appropriate option for each number.

The National Aeronautics and Space Administration's (NASA) Viking Mission to Mars was (1) \_\_\_\_\_ of two spacecraft. Viking 1 and Viking 2, (2) \_\_\_\_\_ consisting of an orbiter and (3) \_\_\_\_\_ lander. The primary objectives (4) \_\_\_\_\_ to obtain images and samples (5) \_\_\_\_\_ the Martian surface and soil.

SubQuestion No : 16

Q.1  
6 Select the most appropriate option that will fill in the blank number 4.

- Ans
- 1. was
  - 2. were
  - 3. is
  - 4. has been

Question ID : 9895808779  
Chosen Option : 1

Comprehension:

In the following passage some words have been deleted. Fill in the blanks with the help of the alternatives given. Select the most appropriate option for each number.

The National Aeronautics and Space Administration's (NASA) Viking Mission to Mars was (1) \_\_\_\_\_ of two spacecraft. Viking 1 and Viking 2, (2) \_\_\_\_\_ consisting of an orbiter and (3) \_\_\_\_\_ lander. The primary objectives (4) \_\_\_\_\_ to obtain images and samples (5) \_\_\_\_\_ the Martian surface and soil.

SubQuestion No : 17

Q.1  
7 Select the most appropriate option that will fill in the blank number 5.

- Ans
- 1. on
  - 2. of
  - 3. for
  - 4. at

Question ID : 9895808780

Q.1  
8 Select the antonym of the given word.

DESPAIR

- Ans  1. Hope  
 2. Distress  
 3. Hopelessness  
 4. Desperation

Question ID : 9895808783  
Chosen Option : 1

Q.1  
9 Select the word which means the same as the group of words given.

A false or assumed identity

- Ans  1. Annals  
 2. Alien  
 3. Archive  
 4. Alias

Question ID : 9895808788  
Chosen Option : 2

Q.2  
0 Select the synonym of the given word.

SUBSTANTIAL

- Ans  1. Considerable  
 2. Worthless  
 3. Slight  
 4. Negligible

Question ID : 9895808781  
Chosen Option : 1

Q.2  
1 Select the most appropriate word to fill in the blank.

Last year the performance of this production unit was \_\_\_\_\_.

- Ans  1. fantastic  
 2. tall  
 3. staggered  
 4. below

Question ID : 9895808791  
Chosen Option : 3

Q.2  
2 Select the antonym of the given word.

ARID

- Ans
- 1. Dry
  - 2. Scorched
  - 3. Wet
  - 4. Parched

Question ID : 9895808784  
Chosen Option : 3

Q.2  
3 Select the wrongly spelt word.

- Ans
- 1. Dilemma
  - 2. Disaster
  - 3. Disappear
  - 4. Develope

Question ID : 9895808789  
Chosen Option : 1

Q.2  
4 Select the word which means the same as the group of words given.

One who loves books

- Ans
- 1. Librarian
  - 2. Bibliophile
  - 3. Orator
  - 4. Veteran

Question ID : 9895808787  
Chosen Option : 2

Q.2  
5 Identify the segment in the sentence which contains the grammatical error from the given options.

The chameleon's tongue is too long that it keeps it folded in the mouth.

- Ans
- 1. too long that
  - 2. The chameleon's
  - 3. in the mouth
  - 4. it keeps

Question ID : 9895808768  
Chosen Option : 1

Section : Hindi Language

Q.1 दिए गए वाक्य का वह भाग ज्ञात करें जिसमें कोई त्रुटि है।

वन के पशुओं को ऐसा लगा कि उन्हें भी एक अच्छा शासन व्यवस्था अपनानी चाहिए।

- Ans
- 1. एक अच्छा शासन व्यवस्था
  - 2. अपनानी चाहिए।
  - 3. वन के पशुओं को
  - 4. ऐसा लगा कि उन्हें भी

Question ID : 9895806997  
Chosen Option : --

Q.2 'कृतज्ञ' का विलोम शब्द है-

Ans

- ✓ 1. निष्ठुर
2. प्रतिकूल
3. कृतघ्न
4. त्यागी

Question ID : 9895807012  
Chosen Option : --

Q.3 'कल्पवृक्ष' का पर्यायवाची शब्द है-

Ans

1. देववृक्ष
2. पेड़
- ✓ 3. तरु
4. हरि

Question ID : 9895807013  
Chosen Option : --

Q.4 रिक्त स्थान को भरने के लिए उपयुक्त शब्द का चयन करें।

मैं कल दिल्ली गया था \_\_\_\_\_ दो दिन बाद कलकत्ता जाऊंगा।

Ans

- ✗ 1. अन्यथा
2. और
3. यद्यपि
- ✗ 4. वरना

Question ID : 9895807001  
Chosen Option : --

Q.5 'चैन की वंशी बजाना' मुहावरे का अर्थ है-

Ans

1. खाली बैठना
2. बांसुरी बजाना
3. बेरोजगार होना
4. मौज करना

Question ID : 9895807015  
Chosen Option : --

Q.6 'लहू का घूँट पीकर रह जाना' मुहावरे का अर्थ है-

Ans

- ✗ 1. डर जाना  
2. क्रोध करना  
3. अपमान सहन कर लेना  
4. क्रोध शांत होना

Question ID : 9895807016  
Chosen Option : --

Q.7 'जिसके आने की तिथि मालूम न हो' शब्द समूह के लिए शब्द है-

- Ans 1. अतिथि  
2. विशिष्ट  
3. मनुष्य  
4. देवता

Question ID : 9895807018  
Chosen Option : --

Q.8 सही वर्तनी वाले शब्द का चयन करें।

- Ans 1. कवयीत्रि  
2. कवयित्री  
3. कवीयित्री  
4. कवियत्री

Question ID : 9895807020  
Chosen Option : --

Comprehension:

निम्नलिखित गद्यांश के रिक्त स्थानों की पूर्ति गद्यांश के नीचे दिए गए प्रश्नों के अनुसार कीजिए-

दीपावली को कई लोग घरों में \_\_\_\_\_ (1) बनाते हैं। इस दिन सब लोग सगे-सम्बन्धियों को \_\_\_\_\_ (2) देते हैं। बच्चे नए वस्त्र पहनते हैं। इस दिन घरों में तरह-तरह के \_\_\_\_\_ (3) बनते हैं। रात को सब लोग लक्ष्मी पूजन करके पटाखे \_\_\_\_\_ (4) हैं। इस दिन घर \_\_\_\_\_ (5) से रोशन किए जाते हैं।

SubQuestion No : 9

Q.9 गद्यांश में संकेतित रिक्त स्थान (1) के लिए उपयुक्त शब्द होगा।

- Ans ✗ 1. गुब्बारे  
2. चमोली  
3. रंगोली  
4. खटोली

Comprehension:

निम्नलिखित गद्यांश के रिक्त स्थानों की पूर्ति गद्यांश के नीचे दिए गए प्रश्नों के अनुसार कीजिए-

दीपावली को कई लोग घरों में \_\_\_\_\_ (1) बनाते हैं। इस दिन सब लोग सगे-सम्बन्धियों को \_\_\_\_\_ (2) देते हैं। बच्चे नए वस्त्र पहनते हैं। इस दिन घरों में तरह-तरह के \_\_\_\_\_ (3) बनते हैं। रात को सब लोग लक्ष्मी पूजन करके पटाखे \_\_\_\_\_ (4) हैं। इस दिन घर \_\_\_\_\_ (5) से रोशन किए जाते हैं।

SubQuestion No : 10

Q.1  
0 गद्यांश में संकेतित रिक्त स्थान (2) के लिए उपयुक्त शब्द होगा।

- Ans
- 1. नमस्कार
  - 2. तिरष्कार
  - 3. प्रहार
  - 4. उपहार

Comprehension:

निम्नलिखित गद्यांश के रिक्त स्थानों की पूर्ति गद्यांश के नीचे दिए गए प्रश्नों के अनुसार कीजिए-

दीपावली को कई लोग घरों में \_\_\_\_\_ (1) बनाते हैं। इस दिन सब लोग सगे-सम्बन्धियों को \_\_\_\_\_ (2) देते हैं। बच्चे नए वस्त्र पहनते हैं। इस दिन घरों में तरह-तरह के \_\_\_\_\_ (3) बनते हैं। रात को सब लोग लक्ष्मी पूजन करके पटाखे \_\_\_\_\_ (4) हैं। इस दिन घर \_\_\_\_\_ (5) से रोशन किए जाते हैं।

SubQuestion No : 11

Q.1  
1 गद्यांश में संकेतित रिक्त स्थान (3) के लिए उपयुक्त शब्द होगा।

- Ans
- 1. उपहार
  - 2. पकवान
  - 3. फल
  - 4. अनाज़

Comprehension:

निम्नलिखित गद्यांश के रिक्त स्थानों की पूर्ति गद्यांश के नीचे दिए गए प्रश्नों के अनुसार कीजिए-

दीपावली को कई लोग घरों में \_\_\_\_\_ (1) बनाते हैं। इस दिन सब लोग सगे-सम्बन्धियों को \_\_\_\_\_ (2) देते हैं। बच्चे नए वस्त्र पहनते हैं। इस दिन घरों में तरह-तरह के \_\_\_\_\_ (3) बनते हैं। रात को सब लोग लक्ष्मी पूजन करके पटाखे \_\_\_\_\_ (4) हैं। इस दिन घर \_\_\_\_\_ (5) से रोशन किए जाते हैं।

SubQuestion No : 12

Q.1  
2 गद्यांश में संकेतित रिक्त स्थान (4) के लिए उपयुक्त शब्द होगा।

- Ans
1. दौड़ाते
  2. जलाते
  3. चलाते
  4. गिराते

Question ID : 9895807009  
Chosen Option : --

Comprehension:

निम्नलिखित गद्यांश के रिक्त स्थानों की पूर्ति गद्यांश के नीचे दिए गए प्रश्नों के अनुसार कीजिए-

दीपावली को कई लोग घरों में \_\_\_\_\_ (1) बनाते हैं। इस दिन सब लोग सगे-सम्बन्धियों को \_\_\_\_\_ (2) देते हैं। बच्चे नए वस्त्र पहनते हैं। इस दिन घरों में तरह-तरह के \_\_\_\_\_ (3) बनते हैं। रात को सब लोग लक्ष्मी पूजन करके पटाखे \_\_\_\_\_ (4) हैं। इस दिन घर \_\_\_\_\_ (5) से रोशन किए जाते हैं।

SubQuestion No : 13

Q.1  
3 गद्यांश में संकेतित रिक्त स्थान (5) के लिए उपयुक्त शब्द होगा।

- Ans
1. सफ़ाई
  2. अग्नि
  3. दीपक
  - ✗ 4. चमक

Question ID : 9895807010  
Chosen Option : --

Q.1  
4 'अर्वाचीन' का का विलोम शब्द चयन करें।

- Ans
- ✓ 1. नवीन
  - ✗ 2. प्राचीन

3. कठिन
4. आधुनिक

Question ID : 9895807011  
Chosen Option : --

Q.1  
5 रिक्त स्थान को भरने के लिए उपयुक्त शब्द का चयन करें।

वह मेरे पास नहीं आ सका \_\_\_\_\_ उसे बुखार था।

- Ans
1. इसलिए
  2. तथापि
  3. परन्तु
  4. क्योंकि

Question ID : 9895807002  
Chosen Option : --

Q.1  
6 दिए गए वाक्य का वह भाग ज्ञात करें जिसमें कोई त्रुटि है।

आदमी वहीं तक जाता है वहाँ तक जाने की उसमें क्षमता हो।

- Ans
1. जाता है
  2. उसमें क्षमता हो।
  3. आदमी वहीं तक
  4. वहाँ तक जाने की

Question ID : 9895806996  
Chosen Option : --

Q.1  
7 रिक्त स्थान को भरने के लिए उपयुक्त शब्द का चयन करें।

राधा वीणा बजा \_\_\_\_\_ है।

- Ans
1. रहि
  2. रहा
  3. रहे
  4. रही

Question ID : 9895807004  
Chosen Option : --

Q.1  
8 दिए गए वाक्य में रेखांकित खंड को प्रतिस्थापित करने के लिए उपयुक्त विकल्प का चयन करें।

तप करने वाला किसी की निंदा नहीं करता।

- Ans
1. वैष्णव
  2. दूरदर्शी
  3. तपस्वी



4. परोपकारी

Question ID : 9895806998  
Chosen Option : --

Q.1  
9 सही वर्तनी वाले शब्द का चयन करें।

- Ans
1. अद्वितिय
  2. अद्वीतिय
  3. आद्वीतीय
  4. अद्वितीय

Question ID : 9895807019  
Chosen Option : --

Q.2  
0 रिक्त स्थान को भरने के लिए उपयुक्त शब्द का चयन करें।

तिरंगा हमारे राष्ट्रीय स्वाभिमान \_\_\_\_\_ प्रतीक है।

- Ans
1. के
  2. का
  3. को
  4. की

Question ID : 9895807003  
Chosen Option : --

Q.2  
1 'शत्रु' का पर्यायवाची शब्द है-

- Ans
1. रिपु
  2. शार्दूल
  3. ईर्ष्यालु
  4. बन्धु

Question ID : 9895807014  
Chosen Option : --

Q.2  
2 दिए गए वाक्य में रेखांकित खंड को प्रतिस्थापित करने के लिए उपयुक्त विकल्प का चयन करें।

श्रवण कुमार की कहानी मर्म को छूने वाली है।

- Ans
1. मर्मस्पर्शी
  2. अतलदर्शी
  3. परामर्शी
  4. दूरदर्शी

Question ID : 9895806999  
Chosen Option : --

Q.2  
3 'आगे होने वाला' शब्द समूह के लिए एक शब्द प्रयुक्त होता है-

Ans

1. अतीत
2. उसी समय
3. भावी
4. तत्काल

Question ID : 9895807017  
Chosen Option : --

Q.2  
4 दिए गए वाक्य का वह भाग ज्ञात करें जिसमें कोई त्रुटि है।

Ans

डॉ. राजेन्द्र प्रसाद राजनीतिज्ञ होने का साथ-साथ भावप्रवण साहित्यकार भी थे।

1. डॉ. राजेन्द्र प्रसाद
2. भावप्रवण साहित्यकार
3. राजनीतिज्ञ होने का साथ-साथ
4. भी थे।

Question ID : 9895806995  
Chosen Option : --

Q.2  
5 दिए गए वाक्य में रेखांकित खंड को प्रतिस्थापित करने के लिए उपयुक्त विकल्प का चयन करें।

Ans

हमें शक्ति के अनुसार गरीबों की मदद करनी चाहिए।

1. यथाभक्ति
2. यथायोग्य
3. यथासम्पत्ति
4. यथाशक्ति

Question ID : 9895807000  
Chosen Option : --