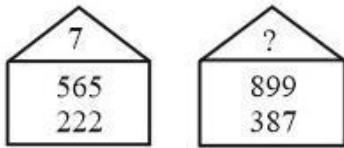


Constable (GD) in CAPFs, NIA, SSF and Rifleman (GD) in Assam Rifles Examination, 2018

Roll No. :	
Registration No.	
Name :	
Exam Venue :	iON Digital Zone iDZ Anantapur
Exam Time :	9:00 AM - 10:30 AM
Exam Date :	07/03/2019

Section : General Section

Q.1 Find the missing number from the below options.



- Ans 1. 8
 2. 9
 3. 11
 4. 6

Question ID : 9895809215
Chosen Option : 3

Q.2

Select the option that is related to the third term in the same way as the second term is related to the first term.

0.24 : 0.0024 :: 3.03 : ?

- Ans 1. 3.030
 2. 0.303
 3. 30.30
 4. 0.0303

Question ID : 9895809213
Chosen Option : 4

Q.3

Five people Palak, Karol, Risha, Saloni and Tisha are travelling in a car. The car has two seats in the front and three at the back. Risha is driving the car. Palak wants to sit at one of the window seats at the back of the car. Tisha wants to sit next to Palak. Karol hates Tisha and will not sit with Tisha. Who is sitting next to the driver?

- Ans 1. Karol
 2. Tisha
 3. Can't be determined
 4. Saloni

Question ID : 9895809206
Chosen Option : 2

Q.4

Select the correct option that will fill in the blank and complete the series.

45, 49, 58, 74, ____

- Ans
- 1. 92
 - 2. 88
 - 3. 99
 - 4. 98

Question ID : 9895809211
Chosen Option : 2

Q.5 Four words have been given out of which three are alike in some manner, while one is different. Choose the odd one.

- Ans
- 1. Bottle
 - 2. Bucket
 - 3. River
 - 4. Jar

Question ID : 9895809200
Chosen Option : 3

Q.6 Select the correct option that will fill in the blank and complete the series.

35, 40, 55, 80, 115, ?

- Ans
- 1. 155
 - 2. 170
 - 3. 165
 - 4. 160

Question ID : 9895809212
Chosen Option : 4

Q.7 The statements below are followed by two conclusions labeled I and II. Assuming that the information in the statements is true, even if it appears to be at variance with generally established facts, decide which conclusion(s) logically and definitely follow(s) from the information given in the statements.

Statements:

Some cows are deer.

Some deer are fishes.

Conclusion:

I. Some cows are fishes.

II. Some fishes are cows.

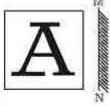
- Ans
- 1. Either conclusion I or II follows
 - 2. Neither conclusion I nor II follows
 - 3. Only conclusion I follows
 - 4. Only conclusion II follows

Question ID : 9895809209
Chosen Option : 1

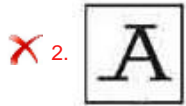

Q.8

Choose the option that most closely resembles the mirror image of the given figure when mirror is placed at right side.

Questions Figure:



Ans



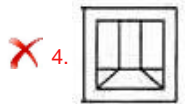
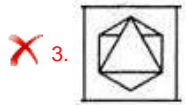
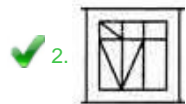
Question ID : 9895809220
Chosen Option : 3

Q.9 Choose the option figure in which the problem figure is hidden/embedded.

Question Figures:



Ans



Question ID : 9895809219
Chosen Option : 1

Q.1
0

The statements below are followed by three conclusions labeled I, II and III. Assuming that the information in the statements is true, even if it appears to be at variance with generally established facts, decide which conclusion(s) logically and definitely follow(s) from the information given in the statements.

Statements:

All pencils are houses.
All houses are eraser.

Conclusions:

- I. Some pencils are eraser.
- II. Some erasers are pencils.
- III. All erasers are pencils.

- Ans**
- 1. Only I and II follow
 - 2. None follows
 - 3. Only II follows
 - 4. All follow

Question ID : 9895809210
Chosen Option : 4

Q.1
1 Select the related word pair from the given alternatives.

Poet : Poem :: _____ : _____

- Ans**
- 1. Paragraph : Lyrics
 - 2. Maths : literature
 - 3. Author : Book
 - 4. Instrument : Video

Question ID : 9895809201
Chosen Option : 3

Q.1
2 Select the option that is related to the fourth term in the same way as the first term is related to the second term.

BDGK : CEHL :: ???? : DFIM

- Ans**
- 1. CEHL
 - 2. CEHM
 - 3. EGJN
 - 4. EGHI

Question ID : 9895809202
Chosen Option : 1

Q.1
3 Select the option that is related to the third term in the same way as the second term is related to the first term.

ACEG : BDFH :: CEGI : ?

- Ans**
- 1. EGIK
 - 2. DFHJ
 - 3. DHIK
 - 4. EGIH

Question ID : 9895809203

Chosen Option : 4

Q.1 A is 15th from the front in a column of boys. There were thrice as many behind him as there were in front. How many boys are there between A and the 7th boy from the end of the column?

- Ans
- 1. 35
 - 2. 40
 - 3. 33
 - 4. 34

Question ID : 9895809208
Chosen Option : 3

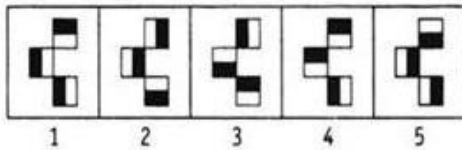
Q.1 If B is coded as 9, F is coded as 3, Q is coded as 2, D is coded as 8, T is coded as 1, M is coded as 6, and K is coded as 7, then what is the coded form of FBMKQT?

- Ans
- 1. 396127
 - 2. 396721
 - 3. 369127
 - 4. 369172

Question ID : 9895809205
Chosen Option : 2

Q.1 Choose the option which come next in the given figure series.

Problem Figures



- Ans
- 1.
 - 2.
 - 3.
 - 4.


Question ID : 9895809217
Chosen Option : 2

Q.1 Four options have been given out of which three are alike in some manner, while one is different. Choose the odd one.

- Ans
- 1. 426
 - 2. 336
 - 3. 257
 - 4.

Q.1
8 Which of the following answer figure will complete the given figure?

Question Figures:



Ans



Q.1 The question below has three items having certain relationship among them. The same relationship is expressed by sets of circles, each circle representing one item irrespective of its size. Match the items with right set of circles.

Apples, Mangoes, Oranges

Ans



Q.2
0 Select the correct option that will fill in the blank and complete the series.

MaN, SaH, YaB, _____

Ans

1. EaV

2. RaC

3. TaD

4. FaV

Question ID : 9895809198
Chosen Option : 2

Q.2 In a certain code, DHONI is written as AELKF. How is EXPOSE written in that code?

1

- Ans 1. BUMLPB
 2. BUNLPB
 3. BUMLQB
 4. BVMLPB

Question ID : 9895809204
Chosen Option : 2

Q.2 Five chairs C1, C2, C3, C4 and C5 are placed one above the other. If C1 is above C2, C3 is above C4 but below C5 and C4 is above C1, which chair is in the middle?

2

- Ans 1. C1
 2. C2
 3. C3
 4. C4

Question ID : 9895809207
Chosen Option : 4

Q.2 A piece of paper is folded and cut as shown below in the question figures. From the given answer figures, how will it appear when opened?

3

Question figures



- Ans 1.
- 2.
- 3.
- 4.

Question ID : 9895809221
Chosen Option : 3

Q.2 Four letter clusters have been given out of which three are alike in some manner, while one is different. Choose the odd one.

4

- Ans 1. QSW
 2. LNR
 3. FHL
 4. NPR

Question ID : 9895809199
Chosen Option : 2

Q.2
5 If 'P' means 'subtracted from', 'X' means 'multiplied by', 'Y' means 'added to', and 'Z' means 'Divided by', then:

$$54 Z 3 Y 22 X 5 = ?$$

- Ans
- 1. 135
 - 2. 128
 - 3. 110
 - 4. 144

Question ID : 9895809216
Chosen Option : 2

Q.2
6 Each water molecule, contains _____ hydrogen atoms and one Oxygen atom.

- Ans
- 1. Two
 - 2. Three
 - 3. One
 - 4. Four

Question ID : 9895808532
Chosen Option : 1

Q.2
7 Which type of soil develops deep cracks during hot weather?

- Ans
- 1. Yellow soil
 - 2. Laterite soil
 - 3. Alluvial soil
 - 4. Black soil

Question ID : 9895808534
Chosen Option : 4

Q.2
8 Pashmina is a fine type of wool which were first woven in which state of India?

- Ans
- 1. Uttar Pradesh
 - 2. Punjab
 - 3. Jammu & Kashmir
 - 4. Himachal Pradesh

Question ID : 9895808517
Chosen Option : 2

Q.2
9 Who was the president of Muslim League in 1930?

- Ans
- 1. Muhammad Iqbal
 - 2. Syed Ahmed Khan
 - 3. Muhammad Ali Jinnah
 - 4. Shaukat Ali

Question ID : 9895808539
Chosen Option : 3

Q.3
0 Which of the following cartoonist is best known for his creation of common man?

- Ans
- 1.

- 2. Sudhir Tailang
- 3. Kutty
- 4. R.K. Laxman

Question ID : 9895808521
Chosen Option : 3

Q.3
1 Which village has shown that it is possible to reverse land degradation?

- Ans
- 1. Bhandardara
 - 2. Majuli
 - 3. Katarmal
 - 4. Sukhomajri

Question ID : 9895808535
Chosen Option : 3

Q.3
2 Which was the first Indian Satellite named after Indian mathematician launched in 1975 by the Soviet Union?

- Ans
- 1. INSAt 1A
 - 2. Bhaskara Segal-I
 - 3. Rohini RS-D1
 - 4. Aryabhata

Question ID : 9895808531
Chosen Option : 3

Q.3
3 In which year did the Khilafat Movement start?

- Ans
- 1. 1922
 - 2. 1923
 - 3. 1920
 - 4. 1921

Question ID : 9895808538
Chosen Option : 2

Q.3
4 The Gateway of India is located in:

- Ans
- 1. Kolkata
 - 2. Delhi
 - 3. Mumbai
 - 4. Bengaluru

Question ID : 9895808516
Chosen Option : 3

Q.3
5 The Bhoodan – Gramdan movement was initiated by:

- Ans
- 1. Maneka Gandhi
 - 2. Medha Patkar
 - 3. Vinoba Bhave

4. Baba Amte

Question ID : 9895808536
Chosen Option : 3

Q.3
6 Which of the following is a popular name of bio gas?

- Ans 1. Uranium
 2. Petroleum
 3. Gobar gas
 4. Coal

Question ID : 9895808533
Chosen Option : 2

Q.3
7 Which of the following is a non-constitutional body of India?

- Ans 1. Finance Commission
 2. State Human Right Commission
 3. National Commission
 4. Election Commission

Question ID : 9895808526
Chosen Option : 4

Q.3
8 Which dam is built on the Narmada River?

- Ans 1. Adhia Dam
 2. Hirakud Dam
 3. Sardar Sarovar Dam
 4. Tehri Dam

Question ID : 9895808529
Chosen Option : 3

Q.3
9 In which colour is a solar cooker painted from the outside?

- Ans 1. Green
 2. Blue
 3. Black
 4. Red

Question ID : 9895808530
Chosen Option : 2

Q.4
0 Which state has the highest per capita income as per year 2017-18?

- Ans 1. Mizoram
 2. Bihar
 3. Maharashtra
 4. Kerala

Question ID : 9895808524
Chosen Option : 3

Q.4 In which Indian state is Dabu printing practiced, which involves applying earth in delicate patterns to cloth and then dipping in dye?

1
Ans 1. Rajasthan

- 2. Orissa
- 3. Andhra Pradesh
- 4. Assam

Question ID : 9895808515
Chosen Option : 3

Q.4 Viswanathan Anand was awarded the Padma Vibushan award in which year?

2
Ans 1. 2011

- 2. 2008
- 3. 2010
- 4. 2009

Question ID : 9895808522
Chosen Option : 3

Q.4 Which of the following terms in our preamble means behaving as if we are members of the same family?

3
Ans 1. Justice

- 2. Democracy
- 3. Fraternity
- 4. Equality

Question ID : 9895808527
Chosen Option : 3

Q.4 'Gella-Chutt' is an indigenous game associated with the state of:

4
Ans 1. Mizoram

- 2. Assam
- 3. Tripura
- 4. Arunachal Pradesh

Question ID : 9895808518
Chosen Option : 3

Q.4 Changing party allegiance from the party with which a person got elected to a different party is called:

5
Ans 1. defection

- 2. separation
- 3. party whip
- 4. alliance building

Question ID : 9895808528
Chosen Option : 3

Q.4
6

- Ans
1. Bangladesh
 2. Nepal
 3. Sri Lanka
 4. Pakistan

Question ID : 9895808525
Chosen Option : 2

Q.4
7 The book 'Wings of Fire' is authored by:

- Ans
1. Salman Rushdie
 2. A.P.J Abdul Kalam
 3. R.K Narayan
 4. Vikram Seth

Question ID : 9895808520
Chosen Option : 2

Q.4
8 In which year was the Rural Employment Generation Programme launched?

- Ans
1. 1993
 2. 1995
 3. 1992
 4. 1994

Question ID : 9895808523
Chosen Option : 3

Q.4
9 Who won the gold medal at Women's National Boxing Championships in 2019?

- Ans
1. Ragini Upadhyay
 2. Nikhat Zareen
 3. Manju Rani
 4. Pinki Rani Jangra

Question ID : 9895808519
Chosen Option : 3

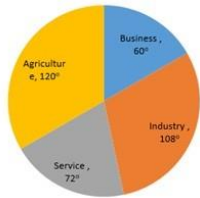
Q.5
0 The rajahs of the Mahajanpadas built forts as they provided _____.

- Ans
1. Mutability
 2. Security
 3. Marketability
 4. Transportability

Question ID : 9895808537
Chosen Option : 3

Q.5
1

DIRECTION: The population of a city is 8000. They have various types of occupation which is given below by the pie-chart. Study the pie-chart and answer the given questions.



How much percent are in service sector from the total population?

- Ans
1. 36%
 2. 20%
 3. 72%
 4. 25%

Question ID : 9895808966
Chosen Option : 1

Q.5
2 The ratio between two numbers is 7 : 16. If the second number is 256 then the first number is:

- Ans
1. 120
 2. 156
 3. 112
 4. 144

Question ID : 9895808953
Chosen Option : 1

Q.5
3 30 persons can do a piece of work in 24 days. How many more people are required to complete the work in 20 days?

- Ans
1. 8
 2. 5
 3. 4
 4. 6

Question ID : 9895808958
Chosen Option : 3

Q.5
4 What is the arithmetic mean of first 8 multiples of 13?

- Ans
1. 55.4
 2. 58.5
 3. 72.5
 4. 61.8

Question ID : 9895808949
Chosen Option : 1

Q.5
5 If $\frac{8x+3y}{4x+5y} = \frac{25}{23}$ then find x : y.

Ans 1. 2 : 3

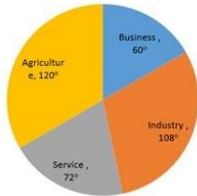
2. 2 : 5

3. 3 : 5

4. 1 : 5

Question ID : 9895808954
Chosen Option : 1

Q.5 DIRECTION: The population of a city is 8000. They have various types of occupation which is given below by the pie-chart. Study the pie-chart and answer the given questions.



How much population percent is less in industry sector than in agriculture sector?

Ans 1. 10%

2. 25%

3. 15%

4. 20%

Question ID : 9895808967
Chosen Option : 3

Q.5 The marked price of an item is ₹ 900 but a retailer purchases it on 40% discount and sells it on ₹ 900. The percentage profit of the retailer is:

Ans 1. 60%

2. $68\frac{1}{3}\%$

3. 40%

4. $66\frac{2}{3}\%$

Question ID : 9895808948
Chosen Option : 1

Q.5 The average of 6 values is 11.2. If 3 is multiplied to each number then what will be the new average?

Ans 1. 22.6

2. 14.6

3. 18.6

4. 33.6

Question ID : 9895808947
Chosen Option : 3

Q.5 The speed of a boat in still water is 9 km/hr and the speed of stream is 3 km/hr. The difference between the upstream speed and downstream speed will be:

- Ans 1. 6 km/hr
2. 5 km/hr
3. 3.5 km/hr
4. 7.5 km/hr

Question ID : 9895808961
Chosen Option : 1

Q.6 Two concentric circles with radii p cm and $(p + 2)$ cm are drawn on a paper. The difference between their areas is 44 sq. cm

0 What is the value of p ? (Take $\pi = \frac{22}{7}$)

- Ans 1. 1.5
2. 5
3. 6
4. 2.5

Question ID : 9895808962
Chosen Option : 3

Q.6 $\frac{4}{7}$ of $\frac{8}{9} \div \frac{8}{7} \times 180$ of $\frac{1}{9} = ?$

- Ans 1. $\frac{20}{9}$
2. $\frac{9}{20}$
3. $\frac{80}{9}$
4. $\frac{9}{80}$

Question ID : 9895808944
Chosen Option : 3

Q.6 If cost prices of 100 note books is same as selling price of 80 note books. What is the percent gain?

- Ans 1. 15%
2. 30%
3. 25%
4. 20%

Question ID : 9895808952
Chosen Option : 4

Q.6 The amounts of ₹ 7500 at compound interest at 4% per annum for 2 years, is:

- Ans 1. ₹ 8100
2. ₹ 8082
3. ₹ 7800
4. ₹ 8112

Question ID : 9895808957
Chosen Option : 3

Q.6
4 21% of a number is 546. What will be 89% of that number?

- Ans
1. 900
 2. 2116
 3. 1200
 4. 2314

Question ID : 9895808950
Chosen Option : 4

Q.6
5 A person bought an item and sold it at a loss of 5%. If he had bought it for 10% less and sold it for ₹ 170 more, he would have had a profit of 20%. Find the cost price of this item. (nearest to ₹ 1)

- Ans
1. ₹ 1440
 2. ₹ 1308
 3. ₹ 1300
 4. ₹ 1500

Question ID : 9895808951
Chosen Option : 3

Q.6
6 A pipe can fill a cistern in 20 minutes whereas the cistern when full can be emptied by a leak in 28 minutes. When both are opened, The time taken to fill the cistern is:

- Ans
1. 80 min
 2. 70 min
 3. 60 min
 4. 48 min

Question ID : 9895808959
Chosen Option : 3

Q.6
7 A certain sum amounts to ₹ 756 in 2 years and to ₹ 873 in $3\frac{1}{2}$ years at a certain rate of simple interest. The rate of interest per annum is:

- Ans
1. 11%
 2. 13%
 3. 10%
 4. 12%

Question ID : 9895808956
Chosen Option : 3

Q.6
8 A square with maximum possible side is drawn in a circle of radius 12 cm. What is the area of square?

- Ans
1. 288 sq. cm
 2. 72 sq. cm
 3. 184 sq. cm

4. 276 sq. cm

Question ID : 9895808963
Chosen Option : 3

Q.6
9 Divide 500 into two parts such that the ratio of one to the other are in 5 : 3?

- Ans
- 1. 312.5, 187.5
 - 2. 308.5, 191.5
 - 3. 280, 220
 - 4. 300, 200

Question ID : 9895808955
Chosen Option : 3

Q.7
0 What value should come in place of the question mark (?) in the following questions?

$$31 \div 3 \times 15 = ?$$

- Ans
- 1. 180
 - 2. 140
 - 3. 165
 - 4. 155

Question ID : 9895808945
Chosen Option : 2

Q.7
1 The speed of a ship in still water is 5 km/hr and the speed of the stream is 2 km/hr. Rohan rows to a place at a distance of 21 km and comes back to the starting point. The total time taken by him is:

- Ans
- 1. 7.2 hours
 - 2. 10 hours
 - 3. 3.6 hours
 - 4. 6 hours

Question ID : 9895808960
Chosen Option : 1

Q.7
2 What is the greatest number that will divide 209 and 347 leaving remainder 5 and 7 respectively?

- Ans
- 1. 23
 - 2. 16
 - 3. 19
 - 4. 17

Question ID : 9895808943
Chosen Option : 3

Q.7
3 The average of first 10 prime number is:

- Ans
- 1. 13.1
 - 2. 12.7

3. 12.9

4. 15.1

Question ID : 9895808946
Chosen Option : 1

Q.7 The area of the cardboard needed to make a closed box of size $10\text{ cm} \times 15\text{ cm} \times 8\text{ cm}$ will be:

4
Ans

1. 700 cm^2

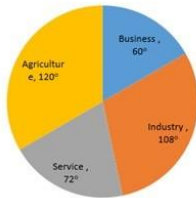
2. 350 cm^2

3. 1000 cm^2

4. 1390 cm^2

Question ID : 9895808964
Chosen Option : 3

Q.7 DIRECTION: The population of a city is 8000. They have various types of occupation which is given below by the pie-chart. Study the pie-chart and answer the given questions.



The ratio of people working in service to industry sectors respectively:

Ans

1. 2 : 3

2. 3 : 5

3. 3 : 4

4. 5 : 3

Question ID : 9895808965
Chosen Option : 3

Section : English Language

Q.1 Select the wrongly spelt word.

Ans

✓ 1. Existance

2. Experience

✗ 3. Eminent

4. Explanation

Question ID : 9895809091
Chosen Option : --

Q.2 Select the most appropriate word to fill in the blank.

A number of people _____ to watch the live performance last night.

Ans

1. gather

2. has gathered
3. has been gathered
4. gathered

Question ID : 9895809074
Chosen Option : --

Q.3 Select the antonym of the given word.

Diminish

- Ans
1. Decrease
 2. Divide
 3. Increase
 4. Reduce

Question ID : 9895809084
Chosen Option : --

Q.4 Select the synonym of the given word.

ACCOMPLISH

- Ans
1. Fail
 2. Hinder
 3. Lose
 4. Achieve

Question ID : 9895809083
Chosen Option : --

Q.5 Select the word which means the same as the group of words given.

A mass of snow, ice, and rocks falling rapidly down a mountainside

- Ans
1. Glacier
 2. Avalanche
 3. Iceberg
 4. Landslide

Question ID : 9895809089
Chosen Option : --

Q.6 Select the meaning of the given idiom.

Under a cloud

- Ans
1. under observation
 2. enjoying favorable luck
 3. experiencing cloudy weather
 4. under suspicion

Q.7 Select the meaning of the given idiom.

Get a kick out of

- Ans
1. Give up something
 2. Enjoy something
 3. Kick something
 4. Predict something

Comprehension:

In the following passage some words have been deleted. Fill in the blanks with the help of the alternatives given. Select the most appropriate option for each number.

An Italian town is offering to pay people up to €2000 to move there. The Mayor of the town has made the (1) _____ in the hope of reversing (2) _____ town's declining population. The population (3) _____ small towns of Italy (4) _____ to the big cities leaving (5) _____ only the aged people. Some towns have been left with as little as twelve residents.

SubQuestion No : 8

Q.8 Select the most appropriate option that will fill in the blank number 1.

- Ans
1. present
 2. offer
 3. reward
 4. gift

Comprehension:

In the following passage some words have been deleted. Fill in the blanks with the help of the alternatives given. Select the most appropriate option for each number.

An Italian town is offering to pay people up to €2000 to move there. The Mayor of the town has made the (1) _____ in the hope of reversing (2) _____ town's declining population. The population (3) _____ small towns of Italy (4) _____ to the big cities leaving (5) _____ only the aged people. Some towns have been left with as little as twelve residents.

SubQuestion No : 9

Q.9 Select the most appropriate option that will fill in the blank

number 2.

- Ans 1. some
 2. one
 3. a
 4. the

Question ID : 9895809078
Chosen Option : --

Comprehension:

In the following passage some words have been deleted. Fill in the blanks with the help of the alternatives given. Select the most appropriate option for each number.

An Italian town is offering to pay people up to €2000 to move there. The Mayor of the town has made the (1) _____ in the hope of reversing (2) _____ town's declining population. The population (3) _____ small towns of Italy (4) _____ to the big cities leaving (5) _____ only the aged people. Some towns have been left with as little as twelve residents.

SubQuestion No : 10

Q.1₀ Select the most appropriate option that will fill in the blank

number 3.

- Ans 1. at
 2. between
 3. from
 4. among

Question ID : 9895809079
Chosen Option : --

Comprehension:

In the following passage some words have been deleted. Fill in the blanks with the help of the alternatives given. Select the most appropriate option for each number.

An Italian town is offering to pay people up to €2000 to move there. The Mayor of the town has made the (1) _____ in the hope of reversing (2) _____ town's declining population. The population (3) _____ small towns of Italy (4) _____ to the big cities leaving (5) _____ only the aged people. Some towns have been left with as little as twelve residents.

SubQuestion No : 11

Q.1₁ Select the most appropriate option that will fill in the blank

number 4.

- Ans 1. transported
 2. migrated
 3. transferred

4. immigrated

Question ID : 9895809080
Chosen Option : --

Comprehension:

In the following passage some words have been deleted. Fill in the blanks with the help of the alternatives given. Select the most appropriate option for each number.

An Italian town is offering to pay people up to €2000 to move there. The Mayor of the town has made the (1) _____ in the hope of reversing (2) _____ town's declining population. The population (3) _____ small towns of Italy (4) _____ to the big cities leaving (5) _____ only the aged people. Some towns have been left with as little as twelve residents.

SubQuestion No : 12

Q.1
2 Select the most appropriate option that will fill in the blank number 5.

- Ans
- 1. beyond
 - 2. below
 - 3. behind
 - 4. before

Question ID : 9895809081
Chosen Option : --

Q.1
3 Select the antonym of the given word.

CONVICTED

- Ans
- 1. Alleged
 - 2. Blamed
 - 3. Acquitted
 - 4. Charged

Question ID : 9895809085
Chosen Option : --

Q.1
4 Select the wrongly spelt word.

- Ans
- 1. Encouragment
 - 2. Questionnaire
 - 3. Environment
 - 4. Performance

Question ID : 9895809090
Chosen Option : --

Q.1
5

Select the most appropriate option to substitute the underlined segment in the given sentence. If there is no need to substitute it, select No substitution required.

The escalator at the railway station is working again, thanks to the effort for our technicians.

- Ans 1. efforts of our technicians
 2. No substitution required
 3. efforts make by our technicians
 4. efforts from our technicians

Question ID : 9895809071
Chosen Option : --

Q.1
6 Select the most appropriate word to fill in the blank.

The bear didn't attack the lady because he was afraid _____ her.

- Ans 1. at
 2. of
 3. from
 4. for

Question ID : 9895809075
Chosen Option : --

Q.1
7 Select the synonym of the given word.

APPARENT

- Ans 1. Hidden
 2. Obvious
 3. Latent
 4. Concealed

Question ID : 9895809082
Chosen Option : --

Q.1
8 Select the most appropriate option to substitute the underlined segment in the given sentence. If there is no need to substitute it, select No substitution required.

Last month, scientists are posting the latest pictures of Mars taken by the Mangalyaan.

- Ans 1. No substitution required
 2. posted
 3. have been posting
 4. will be posting

Question ID : 9895809072
Chosen Option : --

Q.1
9 Select the most appropriate word to fill in the blank.

He was _____ from jail only last month.

Ans

1. imprisoned
2. released
3. arrested
4. sent

Question ID : 9895809092
Chosen Option : --

Q.2 Identify the segment in the sentence which contains the grammatical error from the given options.
0

Before the President can start his speech, he was interrupted by his secretary.

- Ans
1. by his secretary
 2. can start
 3. Before the
 4. was interrupted

Question ID : 9895809069
Chosen Option : --

Q.2 Select the most appropriate option to substitute the underlined segment in the given sentence. If there is no need to substitute it, select No substitution required.
1

His grandfather finds a tiny tiger-cub in the forest and brought him home.

- Ans
1. bringing home
 2. No substitution required
 3. brings him home
 4. has bring home

Question ID : 9895809073
Chosen Option : --

Q.2 Select the most appropriate word to fill in the blank.
2

His proposal was not _____ to me.

- Ans
1. accessible
 2. acceptable
 3. adapted
 4. apparent

Question ID : 9895809093
Chosen Option : --

Q.2 Select the word which means the same as the group of words given.
3

One who loves mankind

- Ans
1. Philanthropist
 2. Misogamist

3. Misanthropist

4. Misogynist

Question ID : 9895809088
Chosen Option : --

Q.2 Identify the segment in the sentence which contains the grammatical error from the given options.
4

The question that there is life on other planets baffles scientists.

Ans

1. The question that

2. there is life

3. baffles scientists

4. on other planets

Question ID : 9895809068
Chosen Option : --

Q.2 Identify the segment in the sentence which contains the grammatical error from the given options.
5

The day he won the Grammy Award was red letter day in the singer's life.

Ans

1. in the singer's life.

2. he won

3. The day

4. was red letter day

Question ID : 9895809070
Chosen Option : --

Section : Hindi Language

Q.1 'हाथ से लिखा हुआ' शब्द समूह के लिए एक शब्द है-

Ans

1. हस्तलाघव

2. निम्नलिखित

3. हस्तक्षेप

4. हस्तलिखित

Question ID : 9895807043
Chosen Option : --

Q.2 रिक्त स्थान को भरने के लिए उपयुक्त शब्द का चयन करें।

राम के _____ आग्रह करने पर मैं उसके घर गया।

Ans

1. अधिक

2. तीव्र

3. नरम

4. बहु

Q.3 'भौतिक' का विलोम है-

- Ans
1. अलौकिक
 - ✗ 2. अभद्र
 3. भविष्य
 4. आध्यात्मिक

Q.4 सही वर्तनी वाले शब्द का चयन करें।

- Ans
- ✗ 1. उपरुक्त
 2. उपर्योक्त
 3. उपर्युक्त
 4. उर्पयुक्त

Q.5 दिए गए वाक्य में रेखांकित खंड को प्रतिस्थापित करने के लिए उपयुक्त विकल्प का चयन करें।

सविता पढ़ना-लिखना जानती है।

- Ans
- ✗ 1. अपढ़
 2. निरक्षर
 - ✗ 3. साक्षर
 4. स्वार्थी

Comprehension:

निम्नलिखित गद्यांश के रिक्त स्थानों की पूर्ति गद्यांश के नीचे दिए गए प्रश्नों के अनुसार कीजिए-

डिजिटल इंडिया में डेटा का डिजिटलाईजेशन आसानी से होगा जो आगे चलकर चीजों को तेज और ज्यादा मजबूत बनाने में _____ (1) होगा। यह कागजी कार्य, समय और मानव श्रम की भी _____ (2) करेगा। सरकार और निजी क्षेत्र के बीच गठबंधन के द्वारा यह प्रोजेक्ट गति _____ (3)। तेज गति नेटवर्क के साथ आपस में जुड़े हुए गाँव बड़े _____ (4) से गुजरेंगे। भारत में सभी शहर, नगर और गाँव _____ (5) तकनीकी होंगे।

SubQuestion No : 6

Q.6

गद्यांश में संकेतित रिक्त स्थान (1) के लिए उपयुक्त शब्द होगा।

- Ans
1. विभाजक
 2. सहायक
 3. रोधक
 4. बाधक

Question ID : 9895807032
Chosen Option : --

Comprehension:

निम्नलिखित गद्यांश के रिक्त स्थानों की पूर्ति गद्यांश के नीचे दिए गए प्रश्नों के अनुसार कीजिए-

डिजिटल इंडिया में डेटा का डिजिटलाईजेशन आसानी से होगा जो आगे चलकर चीजों को तेज और ज्यादा मजबूत बनाने में _____ (1) होगा। यह कागजी कार्य, समय और मानव श्रम की भी _____ (2) करेगा। सरकार और निजी क्षेत्र के बीच गठबंधन के द्वारा यह प्रोजेक्ट गति _____ (3)। तेज गति नेटवर्क के साथ आपस में जुड़े हुए गाँव बड़े _____ (4) से गुजरेंगे। भारत में सभी शहर, नगर और गाँव _____ (5) तकनीकी होंगे।

SubQuestion No : 7

Q.7 गद्यांश में संकेतित रिक्त स्थान (2) के लिए उपयुक्त शब्द होगा।

- Ans
1. आय
 2. हानि
 3. बचत
 4. व्यय

Question ID : 9895807033
Chosen Option : --

Comprehension:

निम्नलिखित गद्यांश के रिक्त स्थानों की पूर्ति गद्यांश के नीचे दिए गए प्रश्नों के अनुसार कीजिए-

डिजिटल इंडिया में डेटा का डिजिटलाईजेशन आसानी से होगा जो आगे चलकर चीजों को तेज और ज्यादा मजबूत बनाने में _____ (1) होगा। यह कागजी कार्य, समय और मानव श्रम की भी _____ (2) करेगा। सरकार और निजी क्षेत्र के बीच गठबंधन के द्वारा यह प्रोजेक्ट गति _____ (3)। तेज गति नेटवर्क के साथ आपस में जुड़े हुए गाँव बड़े _____ (4) से गुजरेंगे। भारत में सभी शहर, नगर और गाँव _____ (5) तकनीकी होंगे।

SubQuestion No : 8

Q.8 गद्यांश में संकेतित रिक्त स्थान (3) के लिए उपयुक्त शब्द होगा।

- Ans
1. दौड़ेगा
 2. पकड़ेगा
 3. चलेगा
 4. रोकेगा

Question ID : 9895807034
Chosen Option : --

Comprehension:

निम्नलिखित गद्यांश के रिक्त स्थानों की पूर्ति गद्यांश के नीचे दिए गए प्रश्नों के अनुसार कीजिए-

डिजिटल इंडिया में डेटा का डिजिटलाइजेशन आसानी से होगा जो आगे चलकर चीजों को तेज और ज्यादा मजबूत बनाने में _____ (1) होगा। यह कागजी कार्य, समय और मानव श्रम की भी _____ (2) करेगा। सरकार और निजी क्षेत्र के बीच गठबंधन के द्वारा यह प्रोजेक्ट गति _____ (3)। तेज गति नेटवर्क के साथ आपस में जुड़े हुए गाँव बड़े _____ (4) से गुजरेंगे। भारत में सभी शहर, नगर और गाँव _____ (5) तकनीकी होंगे।

SubQuestion No : 9

Q.9 गद्यांश में संकेतित रिक्त स्थान (4) के लिए उपयुक्त शब्द होगा।

- Ans
1. लगाव
 2. बदलाव
 3. सुझाव
 4. चुनाव

Question ID : 9895807035
Chosen Option : --

Comprehension:

निम्नलिखित गद्यांश के रिक्त स्थानों की पूर्ति गद्यांश के नीचे दिए गए प्रश्नों के अनुसार कीजिए-

डिजिटल इंडिया में डेटा का डिजिटलाइजेशन आसानी से होगा जो आगे चलकर चीजों को तेज और ज्यादा मजबूत बनाने में _____ (1) होगा। यह कागजी कार्य, समय और मानव श्रम की भी _____ (2) करेगा। सरकार और निजी क्षेत्र के बीच गठबंधन के द्वारा यह प्रोजेक्ट गति _____ (3)। तेज गति नेटवर्क के साथ आपस में जुड़े हुए गाँव बड़े _____ (4) से गुजरेंगे। भारत में सभी शहर, नगर और गाँव _____ (5) तकनीकी होंगे।

SubQuestion No : 10

Q.1
0 गद्यांश में संकेतित रिक्त स्थान (5) के लिए उपयुक्त शब्द होगा।

- Ans
1. ज्यादा
 2. बड़ी
 3. भारी
 4. कम

Question ID : 9895807036
Chosen Option : --

Q.1
1 दिए गए वाक्य का वह भाग ज्ञात करें जिसमें कोई त्रुटि है।
किसी का आचरण वायु के झोंके से हिल नहीं सकती हैं।

- Ans
1. सकती हैं।
 2. हिल नहीं
 3. वायु के झोंके से
 4. किसी का आचरण

Question ID : 9895807021
Chosen Option : --

Q.1
2 दिए गए वाक्य का वह भाग ज्ञात करें जिसमें कोई त्रुटि है।
दुनिया में अनेक प्रकार के छल प्रपंचों का सूत्रपात हुई।

- Ans
1. सूत्रपात हुई।
 2. अनेक प्रकार के
 3. दुनिया में
 4. छल प्रपंचों का

Question ID : 9895807023
Chosen Option : --

Q.1
3 'जिसे कठिनाई से जीता जा सके' के लिए एक शब्द प्रयुक्त होता है-

- Ans
1. अज्ञेय
 2. अजेय
 3. दुर्जेय
 4. विजित

Question ID : 9895807044
Chosen Option : --

Q.1
4

'गूलर का फूल होना' मुहावरे का अर्थ है-

Ans

- ✓ 1. दुर्लभ होना
2. अमीर होना
3. सुलभ होना
4. हीन होना

Question ID : 9895807041
Chosen Option : --

Q.1 5 दिए गए वाक्य में रेखांकित खंड को प्रतिस्थापित करने के लिए उपयुक्त विकल्प का चयन करें।

विद्यापति के पद गाए जा सकते हैं।

Ans

1. पेय
2. प्रदेय
3. गोपनीय
4. गेय

Question ID : 9895807024
Chosen Option : --

Q.1 6 'पत्नी' का पर्याय शब्द है-

Ans

- ✗ 1. ललना
2. भार्या
3. कामिनी
4. महिला

Question ID : 9895807040
Chosen Option : --

Q.1 7 सही वर्तनी वाले शब्द का चयन करें।

Ans

1. विषाद
2. विशाद
3. वीषाद
4. विसाद

Question ID : 9895807045
Chosen Option : --

Q.1 8 दिए गए वाक्य में रेखांकित खंड को प्रतिस्थापित करने के लिए उपयुक्त विकल्प का चयन करें।

धर्म के कार्यों में सहयोग करना चाहिए।

Ans

1. धर्मवान
2. धार्मिक
3. धर्मीय

4. धर्मी

Question ID : 9895807026
Chosen Option : --

Q.1 'त्याग' का विलोम शब्द है-

- Ans 1. ग्रहण
2. परित्याग
3. अनिश्चित
4. विग्रह

Question ID : 9895807037
Chosen Option : --

Q.2 दिए गए वाक्य का वह भाग ज्ञात करें जिसमें कोई त्रुटि है।

इस नश्वर संसार के भोग विलास का सामग्रियाँ भी क्षणभंगुर हैं।

- Ans 1. इस नश्वर
2. भोग विलास का सामग्रियाँ भी
3. क्षणभंगुर हैं।
4. संसार के

Question ID : 9895807022
Chosen Option : --

Q.2 रिक्त स्थान को भरने के लिए उपयुक्त शब्द का चयन करें।

दिल्ली से अनेक पत्रों और पत्रिकाओं का _____ होता है।

- Ans 1. प्रकाशन
2. निर्माण
3. निकलता
4. बनना

Question ID : 9895807030
Chosen Option : --

Q.2 'होम कर देना' मुहावरे का अर्थ है-

- Ans 1. शंकित करना
2. नष्ट कर देना
3. आश्चर्य चकित कर देना
4. हवन करना

Question ID : 9895807042
Chosen Option : --

Q.2

3 'नदी' का पर्यायवाची शब्द है-

Ans

1. निर्झरिणी
- ✓ 2. तालाब
- ✗ 3. सर
- ✗ 4. तड़ाग

Question ID : 9895807039

Chosen Option : --

Q.2
4 रिक्त स्थान को भरने के लिए उपयुक्त शब्द का चयन करें।

उसकी बुद्धि बड़ी _____ है।

Ans

1. विकृति
2. विशाल
3. बुद्धिमान
- ✓ 4. सूक्ष्म

Question ID : 9895807028

Chosen Option : --

Q.2
5 रिक्त स्थान को भरने के लिए उपयुक्त शब्द का चयन करें।

साहित्य और जीवन का _____ संबंध है।

Ans

- ✓ 1. घोर
- ✗ 2. पक्का
- ✗ 3. प्रगाढ़
4. मजबूत

Question ID : 9895807029

Chosen Option : --

Constable (GD) in CAPFs, NIA, SSF and Rifleman (GD) in Assam Rifles Examination, 2018

Roll No. :	
Registration No.	
Name :	
Exam Venue :	iON Digital Zone iDZ Borjhar
Exam Time :	4:00 PM - 5:30 PM
Exam Date :	07/03/2019

Section : General Section

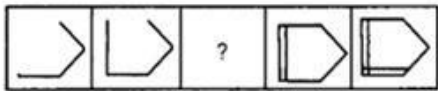
Q.1 Four letter clusters have been given out of which three are alike in some manner, while one is different. Choose the odd one.

- Ans
- 1. ROL
 - 2. GDA
 - 3. WYA
 - 4. FCZ

Question ID : 9895808819
Chosen Option : 3

Q.2 Choose the option figure which completes the given figure series

PROBLEM FIGURES



- Ans
- 1.
 - 2.
 - 3.
 - 4.

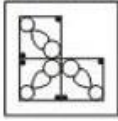
Question ID : 9895808837
Chosen Option : 1

Q.3 Select the option that is related to the third term in the same way as the second term is related to the first term.

- Ans
- 1. 1119
 - 2. 9999
 - 3. 1009
 - 4. 9789

Q.4 Which of the following answer figure will complete the given figure?

Question figure:



Ans



Q.5 P, Q, R, S, T, U and V are sitting around a circular table.

S is not neighbour of R or T.

P is neighbour of Q and R.

V, who is second to the left of S is the neighbour of T and U.

Which of the following is correct?

Ans

1. Can't be determined
2. Q is between R and T
3. S is to the immediate left of U
4. R is between P and T

Q.6 The statements below are followed by two conclusions labeled I and II. Assuming that the information in the statements is true, even if it appears to be at variance with generally established facts, decide which conclusion(s) logically and definitely follow(s) from the information given in the statements.

Statements:

Some books are cards.

Some cards are pretty.

Conclusions :

I. Some books are pretty.

II. Some pretty are books.

Ans

- 1. Only conclusion II follows
- 2. Either I or II follows
- 3. Only conclusion I follows
- 4. Neither I nor II follows

Question ID : 9895808830
Chosen Option : 3

Q.7 Four boys A, B, C, D facing south and four girls P, Q, R, S facing north are to be seated in two rows with four chairs each. Boys and girls face each other. Further

- I. A does not sit at any of the extremes.
- II. B and S always sit in front of each other.
- III. R and Q are never adjacent to each other.
- IV. P is sitting in one of the extremes and doesn't want D to sit in front of her.

Who is sitting in front of A?

- Ans**
- 1. R or Q
 - 2. P or Q
 - 3. Q
 - 4. P

Question ID : 9895808826
Chosen Option : 4

Q.8 In a certain code, CAMP is coded as 16, And TRY as 9, then how is PILOT coded in the same way?

- Ans**
- 1. 24
 - 2. 49
 - 3. 25
 - 4. 36

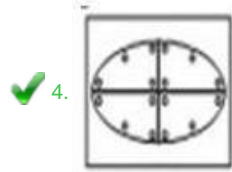
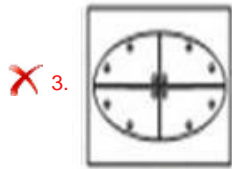
Question ID : 9895808825
Chosen Option : 3

Q.9 A piece of paper is folded and cut as shown below in the question figures, how will it appear when opened?

Question figures:



- Ans**
- 1.
 - 2.



Question ID : 9895808841
Chosen Option : 4

Q.1
0 If 'P' means '-', 'Q' means '÷', 'R' means '+', and 'S' means '×', then:

525 Q 25 R 42 S 4 = ?

- Ans 1. 178
 2. 187
 3. 189
 4. 198

Question ID : 9895808836
Chosen Option : 3

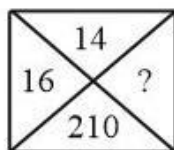
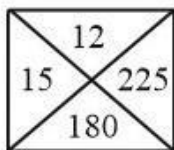
Q.1
1 Select the correct option that will fill in the blank and complete the series.

SL, MO, GR, ?

- Ans 1. CK
 2. AV
 3. HF
 4. AU

Question ID : 9895808818
Chosen Option : 3

Q.1
2 Find the missing number from the below options.



- Ans 1. 210
 2. 250
 3. 230
 4. 240

Q.1
3 In a certain code, NO is coded as MO-NP, then how is PRO coded in the same way?

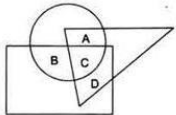
- Ans
- 1. OQ-QS-NP
 - 2. OQ-QR-NT
 - 3. OQ-QS-PN
 - 4. OS-QR-HT

Q.1
4 Select the related word pair from the given alternatives.

yrteop : poetry :: _____ : _____

- Ans
- 1. erhtyo : hetroy
 - 2. iroeth : theori
 - 3. ethory : hteory
 - 4. yroeht : theory

Q.1
5 In the following diagram, the triangle represents doctors, the circle represents players and the rectangle represents singers. Which region represents doctors who are singers but not players?



- Ans
- 1. B
 - 2. C
 - 3. D
 - 4. A

Q.1
6 The statements below are followed by two conclusions labeled I and II. Assuming that the information in the statements is true, even if it appears to be at variance with generally established facts, decide which conclusion(s) logically and definitely follow(s) from the information given in the statements.

Statements:

Some roses are red.

All reds are grass.

Some grass is green.

Conclusions:

I. Some roses are grass.

II. Some green is red.

- Ans
- 1. Only Conclusion I is true
 - 2. Only Conclusion II is true

3. Neither Conclusion I nor II is true
4. Both Conclusions I and II are true

Question ID : 9895808829
Chosen Option : 3

Q.1
7 Select the correct option that will fill in the blank and complete the series.

88, 98, 83, 103, 78, ?

- Ans 1. 108
2. 115
3. 110
4. 107

Question ID : 9895808831
Chosen Option : 1

Q.1
8 Select the related word pair from the given alternatives.

Alzheimer : Brain :: _____ : _____

- Ans 1. Diabetes : Ear
2. Cataract : Eyes
3. Scabies : Nose
4. Kidney : Liver

Question ID : 9895808822
Chosen Option : 4

Q.1
9 Select the related word pair from the given alternatives.

Books :: Stationary : _____ : _____

- Ans 1. Fishmarket : Cloths
2. Vegetable : Grocery
3. Chairs : Furniture
4. Medicine : Nurse

Question ID : 9895808821
Chosen Option : 4

Q.2
0 The positions of Suman and Rajesh in a row are 12th from left and 8th from right respectively. If they interchange their places, then Rajesh will be 17th from right. Find out the position of Suman from left and the total number of persons in the group?

- Ans 1. 21, 27
2. 21, 28
3. 25, 26
4. 20, 28

Question ID : 9895808828
Chosen Option : 3

Q.2 Select the correct option that will fill in the blank and complete the series.

1

12, 12, 13, 26, 28, 84, ?

- Ans
- 1. 93
 - 2. 87
 - 3. 84
 - 4. 95

Question ID : 9895808832
Chosen Option : 2

Q.2 Choose the option figure in which the problem figure is hidden/embedded.

2

Question figure



- Ans
- 1.
 - 2.
 - 3.
 - 4.

Question ID : 9895808839
Chosen Option : 3

Q.2 Four options have been given out of which three are alike in some manner, while one is different. Choose the odd one.

3

- Ans
- 1. 177
 - 2. 66
 - 3. 165
 - 4. 154

Question ID : 9895808834
Chosen Option : 3

Q.2 Which of the answer figure is exactly the mirror image of the given figure, when the mirror is placed on the line AB?

4

Question Figures:



- Ans
- 1.
 - 2.
 - 3.



Question ID : 9895808840
Chosen Option : 2

Q.2
5 Four words have been given out of which three are alike in some manner, while one is different. Choose the odd one.

- Ans
1. Dictionary
 2. Article
 3. Calculator
 4. Encyclopedia

Question ID : 9895808820
Chosen Option : 4

Q.2
6 Which acid-base indicator can be prepared at home?

- Ans
1. Phenolphthalein
 2. Methyl orange
 3. Litmus
 4. Beetroot extract

Question ID : 9895808580
Chosen Option : 1

Q.2
7 What type of soil is the Khadar soil?

- Ans
1. Red soil
 2. Laterite soil
 3. Alluvial soil
 4. Black soil

Question ID : 9895808585
Chosen Option : 3

Q.2
8 Who painted the famous image of Bharat Mata in 1905?

- Ans
1. Abanindranath Tagore
 2. Natesa Sastri
 3. Ravi Varma
 4. Tarinicharan Chattopadhyay

Question ID : 9895808588
Chosen Option : 3

Q.2
9 Which device is used to draw magnetic field lines?

- Ans
1. Ammeter
 2. Electrometer
 3. Compass
 4. Voltmeter

Question ID : 9895808579
Chosen Option : 2

Q.3
0 The Kesar Saga is:

- Ans
1. Tamil epic
 2. Konkani epic
 3. Tibetan epic
 4. Bangla epic

Question ID : 9895808572
Chosen Option : 2

Q.3
1 Who was the first Indian woman engine driver with Northern Railways?

- Ans
1. Surekha Yadav
 2. Shail Mishra
 3. Laxmi Lakra
 4. Tulika Rani

Question ID : 9895808570
Chosen Option : 4

Q.3
2 Which crop is produced during the Zaid season?

- Ans
1. Bajra
 2. Wheat
 3. Maize
 4. Water melon

Question ID : 9895808586
Chosen Option : 1

Q.3
3 Which component of blood helps in the formation of blood clots?

- Ans
1. Veins
 2. Lymph
 3. Platelets
 4. Arteries

Question ID : 9895808582
Chosen Option : 3

Q.3
4 Which of the following words is NOT included in the preamble to the Constitution of India?

- Ans
1. religion
 2. secular
 3. Socialist
 4. equality

Question ID : 9895808577

Q.3
5 Which of the following are called amphibians of the plant kingdom?

- Ans
1. Thallophyta
 2. Gymnosperms
 3. Bryophyta
 4. Angiosperms

Question ID : 9895808583

Chosen Option : 4

Q.3
6 The spinning jenny was devised by:

- Ans
1. James Hargreaves
 2. Henry Luke
 3. T.E. Nicholson
 4. William Hungington

Question ID : 9895808589

Chosen Option : 4

Q.3
7 When was the Board of Control for Cricket in India (BCCI) formed?

- Ans
1. November 1929
 2. December 1931
 3. December 1928
 4. November 1930

Question ID : 9895808569

Chosen Option : 3

Q.3
8 Which of these is NOT an artificial ecosystem?

- Ans
1. Crop field
 2. Forest
 3. Garden
 4. Aquarium

Question ID : 9895808581

Chosen Option : 2

Q.3
9 "People have supreme right to make decisions on internal as well as external matters; no external power can dictate the government of India" this makes India _____

- Ans
1. Fraternal
 2. Socialist
 3. Secular
 4. Sovereign

Question ID : 9895808578

Chosen Option : 4

Q.4
0 Banks charge a higher interest rate on loans than what they offer on _____.

- Ans
1. Deposits
 2. Reserve
 3. Assets
 4. Collateral

Question ID : 9895808574
Chosen Option : 3

Q.4
1 India is a _____ type of federation and some states have more powers than others.

- Ans
1. Coming together
 2. Holding together
 3. Equal
 4. Hierarchical

Question ID : 9895808576
Chosen Option : 3

Q.4
2 Which monument was built by emperor Aurangzeb's son Azam Shah?

- Ans
1. Neela Gumbad
 2. Hawa Mahal
 3. Buland Darwaaza
 4. Bibi Ka Maqbara

Question ID : 9895808565
Chosen Option : 2

Q.4
3 Which of these is NOT an activity that is categorised as primary sector?

- Ans
1. Dairy
 2. Banking
 3. Forestry
 4. Agriculture

Question ID : 9895808575
Chosen Option : 2

Q.4
4 Which of the following were the first to start a trading station in Kerala?

- Ans
1. Portuguese traders
 2. English traders
 3. Dutch traders
 4. French traders

Question ID : 9895808587
Chosen Option : 1

Q.4
5 Who is known as the 'Flying Sikh of India'?

- Ans 1. Kulwinder Singh
 2. Milkha Singh
 3. Mahender Ahluwalia
 4. Gurinder Chadha

Question ID : 9895808568
Chosen Option : 2

Q.4
6 Cheraw is an old traditional dance form associated with:

- Ans 1. Tripura
 2. Nagaland
 3. Mizoram
 4. Manipur

Question ID : 9895808567
Chosen Option : 3

Q.4
7 Which soil is very useful for growing tea and coffee?

- Ans 1. Laterite soil
 2. Red soil
 3. Black soil
 4. Arid soil

Question ID : 9895808584
Chosen Option : 2

Q.4
8 Satyajit Ray was associated with:

- Ans 1. classical dance
 2. classical music
 3. commercial art
 4. film direction

Question ID : 9895808571
Chosen Option : 4

Q.4
9 Which is the most ancient style of Hindustani classical music?

- Ans 1. Qawali
 2. Dhrupad
 3. Sufiyana Kalam
 4. Ghazal

Question ID : 9895808566
Chosen Option : 3

Q.5 Prime Minister Narendra Modi launched Ayushman Bharat health insurance, world's largest government-funded
0 healthcare scheme in _____ state in September 2018.

- Ans 1. Bihar

2. Chhattisgarh
✓ 3. Jharkhand
✗ 4. Uttarakhand

Question ID : 9895808573
Chosen Option : 4

Q.5
1 A and B can do a piece of work in 4 days and C and D in 3 days. In how many days will A, B, C and D do it together?

Ans

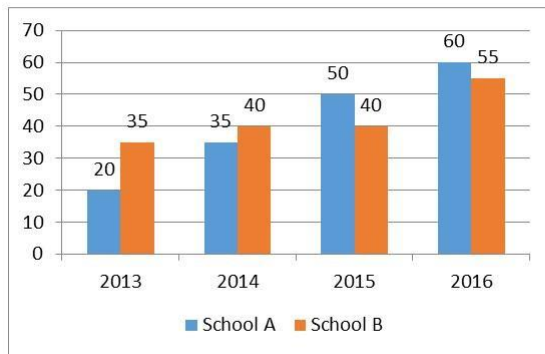
- ✓ 1. $\frac{12}{7}$ days
✗ 2. $\frac{7}{12}$ days
✗ 3. $\frac{2}{3}$ days
✗ 4. $\frac{3}{2}$ days

Question ID : 9895809009
Chosen Option : 3

Q.5 DIRECTIONS: Study the following graph and answer the given questions.

2

(Number of students admitted in two different school over the years:)



What was the difference between the total number of students admitted in the year 2015 and total number of students admitted in the year 2016?

Ans

1. 15
2. 25
3. 28
4. 22

Question ID : 9895809016
Chosen Option : 2

Q.5
3 If 5 girls can embroider a dress in 9 days, then the number of days taken by 3 girls to do it will be _____.

Ans

1. 15 days
2. 14 days
3. 10 days
4. 20 days

Question ID : 9895809008

Q.5
4 A Train of 225 m length passes a man sitting in a stationary train in 12.5 second. What is the speed of the Train?

- Ans
1. 12 m/s
 2. 24 m/s
 3. 18 m/s
 4. 14 m/s

Question ID : 9895809011
Chosen Option : 4

Q.5
5 Find the value of the following expression.

$$51 \div 3 \times 15 = ?$$

- Ans
1. 140
 2. 255
 3. 130
 4. 100

Question ID : 9895808995
Chosen Option : 3

Q.5
6 The average height of 8 persons decreases by 2.5 cm, when one person whose height is 170 cm is replaced by a new person. What is the height of the new person?

- Ans
1. 155 cm
 2. 150 cm
 3. 165 cm
 4. 160 cm

Question ID : 9895808997
Chosen Option : 3

Q.5
7 A girl takes 30 seconds to cover a distance of 300 meters by scooty. Her speed, in km/hr, is:

- Ans
1. 36 km/hr
 2. 24 km/hr
 3. 34 km/hr
 4. 26 km/hr

Question ID : 9895809010
Chosen Option : 1

Q.5
8 Bhavan invested two equal amounts at simple interest. He invested one amount at 15% p.a. and the other at 20% p.a. The total interest earned at the end of a year was ₹ 1400. The total amount invested (in ₹) was:

- Ans
1. 8000
 2. 5000
 3. 4000
 4. 10000

Question ID : 9895809006
Chosen Option : 3

Q.5 A wall of $12\text{ m} \times 8\text{ m}$ has a door of $3\text{ m} \times 1.5\text{ m}$ and two windows each of $1.5\text{ m} \times 1.5\text{ m}$. Find the area of wall that can be paint.

- Ans
- 1. 80 sq. cm
 - 2. 87 sq. cm
 - 3. 96 sq. cm
 - 4. 65 sq. cm

Question ID : 9895809012
Chosen Option : 4

Q.6 A person buys an article at $\frac{3}{4}$ of its value and sells it for 30% more than its value. What is his gain%?

- Ans
- 1. $73\frac{1}{3}\%$
 - 2. 75%
 - 3. 50%
 - 4. $65\frac{1}{3}\%$

Question ID : 9895809001
Chosen Option : 2

Q.6 Two numbers are in the ratio 7 : 9. On diminishing each of them by 20, the new ratio becomes 3 : 5. The difference between the original numbers is:

- Ans
- 1. 15
 - 2. 12
 - 3. 10
 - 4. 14

Question ID : 9895809005
Chosen Option : 2

Q.6 The compound interest on a certain sum for 2 years at 3% per annum is ₹ 101.50. On the same principal, what will be the simple interest at same rate in same time?

- Ans
- 1. ₹ 100
 - 2. ₹ 90
 - 3. ₹ 95.5
 - 4. ₹ 98.21

Question ID : 9895809007
Chosen Option : 3

Q.6 A shopkeeper allows an extra discount of 12% on a radio after giving an initial discount of 20%. If the final selling price of the radio is ₹ 704 then what is the marked price?

- Ans
- 1. ₹ 980
 - 2. ₹ 1000

~~3.~~ ₹ 1200

4. ₹ 800

Question ID : 9895808998
Chosen Option : 3

Q.6
4 The average age of 6 men, whose ages are 42, 48, 65, 35, 55, 49 years is:

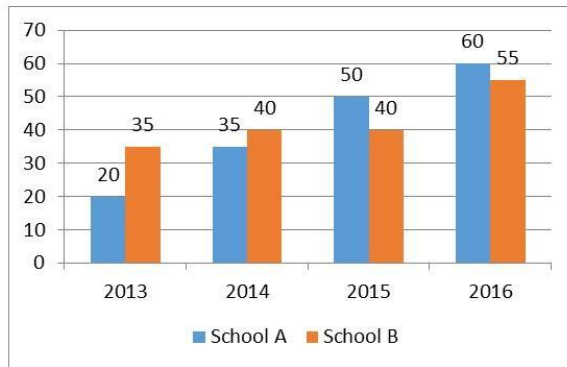
Ans

1. 49
2. 48
3. 47
4. 46

Question ID : 9895808996
Chosen Option : 3

Q.6
5 DIRECTIONS: Study the following graph and answer the given questions.

(Number of students admitted in two different School over the years:)



What was the ratio between the number of students admitted in school A in the year 2013 and the total number of students admitted in both the school together in the year 2016?

Ans

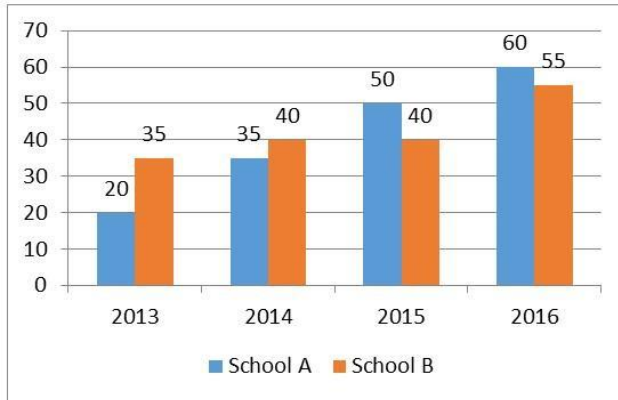
1. 4 : 19
2. 4 : 23
3. 21 : 5
4. 3 : 17

Question ID : 9895809017
Chosen Option : 2

Q.6
6

DIRECTIONS: Study the following graph and answer the given questions.

(Number of students admitted in two different school over the years:)



In which year the total number of students admitted in both the school together was the second lowest?

- Ans
1. 2013
 2. 2016
 3. 2014
 4. 2015

Question ID : 9895809015
Chosen Option : 3

Q.6 The mean of 22 observations is 35. It was later discovered that 16 and 24 are misread as 31 and 42. What is the correct mean?
7

- Ans
- ✓ 1. 33.5
 - ✗ 2. 31.5
 - ✗ 3. 32
 - ✗ 4. 34

Question ID : 9895808999
Chosen Option : 3

Q.6 If ?% of $\frac{2}{3} = \frac{1}{2}$ then the value of '?' is:
8

- Ans
1. 57
 2. 75
 3. 0.75
 4. 7.5

Question ID : 9895809000
Chosen Option : 3

Q.6 A rectangular farm has to be fenced on one long side, one short side and one diagonal. If the cost of fencing is ₹ 10 per meter, the area of the farm is 4800 m² and the short side is 60 m long, the cost of doing the job will be:
9

- Ans
- ✗ 1. ₹ 2100
 - ✗ 2. ₹ 1800
 - ✓ 3. ₹ 2400
 - ✗ 4. ₹ 3600

Question ID : 9895809013
Chosen Option : 3

Q.7
0 The perimeter of a right triangle is 30 cm and its hypotenuse is 13 cm. The area of the triangle is:

- Ans
- 1. 30 sq. cm
 - 2. 26 sq. cm
 - 3. 60 sq. cm
 - 4. 45 sq. cm

Question ID : 9895809014
Chosen Option : 3

Q.7
1 The ratio of A to B is 4 : 5 and that of B to C is 2 : 3. If A is equal to 240 then C is equal to:

- Ans
- 1. 450
 - 2. 420
 - 3. 300
 - 4. 150

Question ID : 9895809003
Chosen Option : 3

Q.7
2 Mohit sells a Almirah to Rohit at a profit of 11% and Rohit sells it to Neha at a profit of 20%. If Neha pays ₹ 6,200 for it, then the cost price of almirah for Mohit is:

- Ans
- 1. ₹ 4654.65
 - 2. ₹ 4244.65
 - 3. ₹ 4634.65
 - 4. ₹ 4184.65

Question ID : 9895809002
Chosen Option : 3

Q.7
3 The sum of three numbers is 65. If the ratio of the first to the second be 3 : 4 and that of the second to the third 2 : 3, then the second number is:

- Ans
- 1. 15
 - 2. 20
 - 3. 30
 - 4. 25

Question ID : 9895809004
Chosen Option : 3

Q.7
4 The value of the following expression.

$$(47 \times 588) \div (28 \times 120) = ?$$

- Ans
- 1. 6.284
 - 2. 8.285

3. 7.625

4. 8.225

Question ID : 9895808994
Chosen Option : 3

Q.7
5 The greatest number which divides 928, 1247 and 1653 exactly, is:

Ans 1. 23

2. 19

3. 29

4. 33

Question ID : 9895808993
Chosen Option : 3

Section : English Language

Q.1 Select the meaning of the given idiom.

To strain every nerve

Ans 1. To put maximum effort

2. To spoil relationship

3. To be unwell

4. To get away with

Question ID : 9895809139
Chosen Option : 3

Q.2 Select the word which means the same as the group of words given.

One who is indifferent to pleasure or pain

Ans 1. Stoic

2. Heroic

3. Garrulous

4. Stubborn

Question ID : 9895809141
Chosen Option : 3

Q.3 Identify the segment in the sentence which contains the grammatical error from the given options.

In fact, what we common termed as housework actually involves many different tasks.

Ans 1. involves

2. common termed

3. different tasks

4. In fact

Question ID : 9895809121

Q.4 Select the wrongly spelt word.

- Ans 1. Embarass
 2. Conscience
 3. Playwright
 4. Rhythm

Question ID : 9895809143
Chosen Option : 3

Q.5 Select the synonym of the given word.

PASSION

- Ans 1. Passivity
 2. Indifference
 3. Desire
 4. Hatred

Question ID : 9895809135
Chosen Option : 3

Q.6 Select the most appropriate word to fill in the blank.

In the 1980s, many women _____ the country spoke out against dowry deaths.

- Ans 1. through
 2. above
 3. over
 4. across

Question ID : 9895809127
Chosen Option : 1

Q.7 Select the word which means the same as the group of words given.

Happening or being done at exactly the same time

- Ans 1. Superfluous
 2. Immediate
 3. Obsolete
 4. Simultaneous

Question ID : 9895809140
Chosen Option : 3

Q.8 Select the most appropriate word to fill in the blank.

The Indian cricket team was in a _____ mood after winning the series.

Ans

- 1. jubilant
- 2. serene
- 3. anxious
- 4. glorious

Question ID : 9895809145
Chosen Option : 3

Q.9 Select the antonym of the given word.

ALIEN

- Ans
- 1. Unfamiliar
 - 2. Foreign
 - 3. Overseas
 - 4. Native

Question ID : 9895809136
Chosen Option : 3

Q.1 Select the meaning of the given idiom.

Fight shy of

- Ans
- 1. To be frightened
 - 2. To avoid encountering
 - 3. To be in an angry state
 - 4. To quarrel bitterly

Question ID : 9895809138
Chosen Option : 3

Comprehension:


In the following passage some words have been deleted. Fill in the blanks with the help of the alternatives given. Select the most appropriate option for each number.

Media is the plural of the word 'medium'. (1) _____ describes the various ways (2) _____ which we communicate in society. Because media refers (3) _____ all means of communication, everything (4) _____ from a phone call to the evening news on TV can be (5) _____ media.

SubQuestion No : 11

Q.1 Select the most appropriate option that will fill in the blank number 1.

- Ans
- 1. It
 - 2. These
 - 3. They

 4. Its

Question ID : 9895809129
Chosen Option : 3




Comprehension:

In the following passage some words have been deleted. Fill in the blanks with the help of the alternatives given. Select the most appropriate option for each number.

Media is the plural of the word 'medium'. (1) _____ describes the various ways (2) _____ which we communicate in society. Because media refers (3) _____ all means of communication, everything (4) _____ from a phone call to the evening news on TV can be (5) _____ media.

SubQuestion No : 12

Q.1
2 Select the most appropriate option that will fill in the blank number 2.

- Ans  1. from
 2. with
3. through
 4. for

Question ID : 9895809130
Chosen Option : 3




Comprehension:

In the following passage some words have been deleted. Fill in the blanks with the help of the alternatives given. Select the most appropriate option for each number.

Media is the plural of the word 'medium'. (1) _____ describes the various ways (2) _____ which we communicate in society. Because media refers (3) _____ all means of communication, everything (4) _____ from a phone call to the evening news on TV can be (5) _____ media.

SubQuestion No : 13

Q.1
3 Select the most appropriate option that will fill in the blank number 3.

- Ans  1. for
 2. about
 3. to
 4. in

Question ID : 9895809131
Chosen Option : 3

Comprehension:

In the following passage some words have been deleted. Fill in the blanks with the help of the alternatives given. Select the most appropriate option for each number.

Media is the plural of the word 'medium'. (1) _____ describes the various ways (2) _____ which we communicate in society. Because media refers (3) _____ all means of communication, everything (4) _____ from a phone call to the evening news on TV can be (5) _____ media.

SubQuestion No : 14

Q.1
4 Select the most appropriate option that will fill in the blank number 4.

- Ans
1. ranged
 2. ranges
 3. ranging
 4. is ranging

Question ID : 9895809132
Chosen Option : 3

Comprehension:

In the following passage some words have been deleted. Fill in the blanks with the help of the alternatives given. Select the most appropriate option for each number.

Media is the plural of the word 'medium'. (1) _____ describes the various ways (2) _____ which we communicate in society. Because media refers (3) _____ all means of communication, everything (4) _____ from a phone call to the evening news on TV can be (5) _____ media.

SubQuestion No : 15

Q.1
5 Select the most appropriate option that will fill in the blank number 5.

- Ans
1. called
 2. opted
 3. chosen
 4. certified

Question ID : 9895809133
Chosen Option : 3

Q.1
6 Select the most appropriate option to substitute the underlined segment in the given sentence. If there is no need to substitute it, select No substitution required.

Many families are so poor to bear the cost of educating their children.

- Ans
1. No substitution required
 2. too poor to

3. too much poor to
4. more poor for

Question ID : 9895809125
Chosen Option : 3

Q.1 Select the most appropriate option to substitute the underlined segment in the given sentence. If there is no need to substitute it, select No substitution required.

Many people believe that women make better nurses because they are patient and gentle.

- Ans
1. because they have been
 2. because they were
 3. No substitution required
 4. as they would

Question ID : 9895809123
Chosen Option : 2

Q.1 Select the most appropriate option to substitute the underlined segment in the given sentence. If there is no need to substitute it, select No substitution required.

In the nineteenth century, many new ideas about education and learning were being emerged.

- Ans
1. is emerging
 2. emerged
 3. No substitution required
 4. was emerging

Question ID : 9895809124
Chosen Option : 2

Q.1 Select the wrongly spelt word.

- Ans
1. Medieval
 2. Maintainance
 3. Manipulate
 4. Marriage

Question ID : 9895809142
Chosen Option : 3

Q.2 Select the most appropriate word to fill in the blank.

The unfortunate boy was _____ by the racing car.

- Ans
1. knocked about
 2. knocked at
 3. knocked down
 4. knocked back

Question ID : 9895809144
Chosen Option : 3

Q.2
1 Select the synonym of the given word.

RELEVANT

- Ans
- 1. Natural
 - 2. Realistic
 - 3. Unrelated
 - 4. Applicable

Question ID : 9895809134
Chosen Option : 2

Q.2
2 Select the most appropriate word to fill in the blank.

Different strategies have been used _____ awareness about education.

- Ans
- 1. spread
 - 2. to spread
 - 3. spreading
 - 4. to spreading

Question ID : 9895809126
Chosen Option : 2

Q.2
3 Identify the segment in the sentence which contains the grammatical error from the given options.

The government has set up Anganwadis or child-care centers in several village in the country.

- Ans
- 1. set up
 - 2. several village
 - 3. in the country.
 - 4. The government

Question ID : 9895809122
Chosen Option : 1

Q.2
4 Select the antonym of the given word.

APPARENT

- Ans
- 1. Hidden
 - 2. Likely
 - 3. Obvious
 - 4. Appealing

Question ID : 9895809137
Chosen Option : 3

Q.2
5 Identify the segment in the sentence which contains the grammatical error from the given options.

The political party that have the majority is called the ruling party.

Ans

- 1. ruling party
- 2. that have
- 3. The political
- 4. the majority

Question ID : 9895809120
Chosen Option : 2

Section : Hindi Language

Q.1 'गूँगे का गुड़' अर्थ के लिए सही मुहावरे का चयन करें।

- Ans
- 1. असंभव कार्य
 - 2. दुर्लभ वस्तु
 - 3. कीमती वस्तु
 - 4. अवर्णनीय अनुभव

Question ID : 9895807093
Chosen Option : --

Q.2 रिक्त स्थान को भरने के लिए उपयुक्त शब्द का चयन करें।

मनोज, नीरज और कविता खेल _____ हैं।

- Ans
- 1. रहीं
 - 2. रहे
 - 3. रही
 - 4. रहती

Question ID : 9895807079
Chosen Option : --

Q.3 सही वर्तनी वाले शब्द का चयन करें।

- Ans
- 1. आर्शिवाद
 - 2. बिमारी
 - 3. परिक्षा
 - 4. पारलौकिक

Question ID : 9895807097
Chosen Option : --

Q.4 'आत्मजा' का पर्यायवाची शब्द है -

- Ans
- 1. भार्या
 - 2. तनया

✗ 3. सुत

4. अंबा

Question ID : 9895807092
Chosen Option : --

Q.5 दिए गए वाक्य का वह भाग ज्ञात करें जिसमें कोई त्रुटि है।

हम अनेकों छोटे-बड़े वर्गों में बँटे हुए हैं।

Ans

1. हम अनेकों
2. छोटे-बड़े
3. वर्गों में
4. बँटे हुए हैं।

Question ID : 9895807073
Chosen Option : --

Q.6 दिए गए वाक्य में रेखांकित खंड को प्रतिस्थापित करने के लिए उपयुक्त विकल्प का चयन करें।

उसकी हरकतें गाँव वालों जैसी हैं।

Ans

1. गाँवई
2. ग्रामीणों
3. गाँवारू
4. अनपढ़ों

Question ID : 9895807076
Chosen Option : --

Q.7 'उपकार' का विलोम शब्द है-

Ans

1. परोपकार
- ✗ 2. मदद
- ✓ 3. अपकार
- ✗ 4. सहायता

Question ID : 9895807089
Chosen Option : --

Q.8 रिक्त स्थान को भरने के लिए उपयुक्त शब्द का चयन करें।

यह एक बहुत ही _____ समस्या है।

Ans

1. चिंतित
2. अच्छी
3. निश्चिन्त
4. गंभीर

Q.9 रिक्त स्थान को भरने के लिए उपयुक्त शब्द का चयन करें।

बच्चे की आँखों से आँसू बहने _____।

Ans

1. हुए
- ✓ 2. लगा
3. लगे
- ✗ 4. लगी

Q.1 'अधुनातन' का विलोम शब्द चयन करें।

Ans

1. पुरातन
2. आधुनिक
- ✗ 3. नया
- ✗ 4. अनावरण

Comprehension:

निम्नलिखित गद्यांश के रिक्त स्थानों की पूर्ति गद्यांश के नीचे दिए गए प्रश्नों के अनुसार कीजिए-

मनुष्य शारीरिक कष्ट से ही पीछे _____ (1) वाला प्राणी नहीं है। मानसिक क्लेश की संभावना से भी कर्मों की ओर प्रवृत्त होने का _____ (2) उसे नहीं होता। जिन बातों से समाज के बीच उपहास, निन्दा, अपमान इत्यादि का _____ (3) रहता है उन्हें अच्छा समझते हुए भी बहुत से लोग उनसे दूर रहते हैं। _____ (4) देखते हुए भी बहुत से लोग प्रथाओं का पालन इसलिए करते हैं कि नहीं करने से वे बुरे कहे जायेंगे। लोगों में उनका _____ (5) न रह जायेगा।

SubQuestion No : 11

Q.1 गद्यांश में संकेतित रिक्त स्थान (1) के लिए उपयुक्त शब्द होगा।

Ans

1. हटने
2. करने
3. मिटने
4. लगने

Comprehension:

निम्नलिखित गद्यांश के रिक्त स्थानों की पूर्ति गद्यांश के नीचे दिए गए प्रश्नों के अनुसार कीजिए-

मनुष्य शारीरिक कष्ट से ही पीछे _____ (1) वाला प्राणी नहीं है। मानसिक क्लेश की संभावना से भी कर्मों की ओर प्रवृत्त होने का _____ (2) उसे नहीं होता। जिन बातों से समाज के बीच उपहास, निन्दा, अपमान इत्यादि का _____ (3) रहता है उन्हें अच्छा समझते हुए भी बहुत से लोग उनसे दूर रहते हैं। _____ (4) देखते हुए भी बहुत से लोग प्रथाओं का पालन इसलिए करते हैं कि नहीं करने से वे बुरे कहे जायेंगे। लोगों में उनका _____ (5) न रह जायेगा।

SubQuestion No : 12

Q.1
2 गद्यांश में संकेतित रिक्त स्थान (2) के लिए उपयुक्त शब्द होगा।

- Ans 1. इच्छा
 2. प्रेरणा
 3. लगन
 4. साहस

Question ID : 9895807085

Chosen Option : --

Comprehension:

निम्नलिखित गद्यांश के रिक्त स्थानों की पूर्ति गद्यांश के नीचे दिए गए प्रश्नों के अनुसार कीजिए-

मनुष्य शारीरिक कष्ट से ही पीछे _____ (1) वाला प्राणी नहीं है। मानसिक क्लेश की संभावना से भी कर्मों की ओर प्रवृत्त होने का _____ (2) उसे नहीं होता। जिन बातों से समाज के बीच उपहास, निन्दा, अपमान इत्यादि का _____ (3) रहता है उन्हें अच्छा समझते हुए भी बहुत से लोग उनसे दूर रहते हैं। _____ (4) देखते हुए भी बहुत से लोग प्रथाओं का पालन इसलिए करते हैं कि नहीं करने से वे बुरे कहे जायेंगे। लोगों में उनका _____ (5) न रह जायेगा।

SubQuestion No : 13

Q.1
3 गद्यांश में संकेतित रिक्त स्थान (3) के लिए उपयुक्त शब्द होगा।

- Ans 1. व्यथा
 2. घृणा
 3. भय

Comprehension:

निम्नलिखित गद्यांश के रिक्त स्थानों की पूर्ति गद्यांश के नीचे दिए गए प्रश्नों के अनुसार कीजिए-

मनुष्य शारीरिक कष्ट से ही पीछे _____ (1) वाला प्राणी नहीं है। मानसिक क्लेश की संभावना से भी कर्मों की ओर प्रवृत्त होने का _____ (2) उसे नहीं होता। जिन बातों से समाज के बीच उपहास, निन्दा, अपमान इत्यादि का _____ (3) रहता है उन्हें अच्छा समझते हुए भी बहुत से लोग उनसे दूर रहते हैं। _____ (4) देखते हुए भी बहुत से लोग प्रथाओं का पालन इसलिए करते हैं कि नहीं करने से वे बुरे कहे जायेंगे। लोगों में उनका _____ (5) न रह जायेगा।

SubQuestion No : 14

Q.1
4 गद्यांश में संकेतित रिक्त स्थान (4) के लिए उपयुक्त शब्द होगा।

- Ans
- 1. लाभ
 - 2. स्वार्थ
 - 3. हानि
 - 4. यश

Comprehension:

निम्नलिखित गद्यांश के रिक्त स्थानों की पूर्ति गद्यांश के नीचे दिए गए प्रश्नों के अनुसार कीजिए-

मनुष्य शारीरिक कष्ट से ही पीछे _____ (1) वाला प्राणी नहीं है। मानसिक क्लेश की संभावना से भी कर्मों की ओर प्रवृत्त होने का _____ (2) उसे नहीं होता। जिन बातों से समाज के बीच उपहास, निन्दा, अपमान इत्यादि का _____ (3) रहता है उन्हें अच्छा समझते हुए भी बहुत से लोग उनसे दूर रहते हैं। _____ (4) देखते हुए भी बहुत से लोग प्रथाओं का पालन इसलिए करते हैं कि नहीं करने से वे बुरे कहे जायेंगे। लोगों में उनका _____ (5) न रह जायेगा।

SubQuestion No : 15

Q.1
5 गद्यांश में संकेतित रिक्त स्थान (5) के लिए उपयुक्त शब्द होगा।

Ans

1. निरादर
2. अपमान
3. संभव
4. सम्मान

Question ID : 9895807088
Chosen Option : --

Q.1
6 'बहुत अधिक अभावग्रस्त होना' अर्थ के लिए सही मुहावरे का चयन करें।

- Ans
1. आटा गीला होना
 2. मुँह उतरना
 3. दाने-दाने को तरसना
 4. पेट में चूहे कूदना

Question ID : 9895807094
Chosen Option : --

Q.1
7 'वातायन' का पर्यायवाची है-

- Ans
1. द्वार
 2. ताख
 3. गवाक्ष
 4. छत

Question ID : 9895807091
Chosen Option : --

Q.1
8 दिए गए वाक्य में रेखांकित खंड को प्रतिस्थापित करने के लिए उपयुक्त विकल्प का चयन करें।

मृत्यु जीवन का शाश्वत् सत्य है।

- Ans
1. एकमात्र
 2. अंतिम
 3. दुःखद
 4. चिरन्तन

Question ID : 9895807078
Chosen Option : --

Q.1
9 सही वर्तनी वाले शब्द का चयन करें।

- Ans
1. शिताब्दि
 2. शैताब्दी
 3. शताब्दी
 4. शताब्दि

Question ID : 9895807098
Chosen Option : --

Q.2
0 दिए गए वाक्य का वह भाग ज्ञात करें जिसमें कोई त्रुटि है।

पाखंड व दिखावा हमारे जीवन का अभिन्न अंग बन गयी है।

Ans

1. अभिन्न अंग
2. बन गयी है।
3. हमारे जीवन का
4. पाखंड व दिखावा

Question ID : 9895807074
Chosen Option : --

Q.2
1 रिक्त स्थान को भरने के लिए उपयुक्त शब्द का चयन करें।

_____ कपड़ा सिलना नहीं आता।

Ans

1. उससे
2. उसने
3. उसे
4. वे

Question ID : 9895807082
Chosen Option : --

Q.2
2 'सब जगह' के लिए एक शब्द है-

Ans

1. सर्वेश
2. सर्वत्र
3. समदर्शी
4. वायु

Question ID : 9895807095
Chosen Option : --

Q.2
3 दिए गए वाक्य का वह भाग ज्ञात करें जिसमें कोई त्रुटि है।

शिक्षित वर्ग की बेकारी श्रम का अवज्ञा के परिणाम का सबसे ज्वलंत उदाहरण है।

Ans

1. शिक्षित वर्ग की बेकारी
2. श्रम का अवज्ञा के परिणाम का
3. उदाहरण है।
4. सबसे ज्वलंत

Question ID : 9895807075
Chosen Option : --

Q.2
4 दिए गए वाक्य में रेखांकित खंड को प्रतिस्थापित करने के लिए उपयुक्त विकल्प का चयन करें।

'रामचरितमानस' की तुलना नहीं की जा सकती है।

Ans

1. तुलनीय
 2. अचिंत्य
 3. अपकर्ष
 4. अतुलनीय

Question ID : 9895807077
Chosen Option : --

Q.2
5

'पंद्रह दिन में एक बार होने वाला' के लिए एक शब्द है-

Ans

1. मासिक
 2. पाक्षिक
 3. वार्षिक
 4. अर्द्धवार्षिक

Question ID : 9895807096
Chosen Option : --