

Constable (GD) in CAPFs, NIA, SSF and Rifleman (GD) in Assam Rifles Examination, 2018

Roll No. :	
Registration No.	
Name :	
Exam Venue :	iON Digital Zone iDZ Anantapur
Exam Time :	9:00 AM - 10:30 AM
Exam Date :	09/03/2019

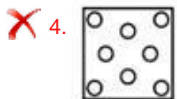
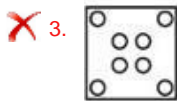
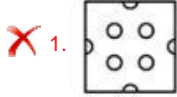
Section : **General Section**

Q.1 A piece of paper is folded and punched as shown below in the question figures, indicate how it will appear when opened.

Question Figure:



Ans



Question ID : 9895809271

Chosen Option : 2

Q.2

Select the correct option that will fill in the blank and complete the series.

FAV, HET, KIQ, _____

Ans

1. RHS

2. OMM

3. DFB

4. ONM

Question ID : 9895809248

Chosen Option : 2

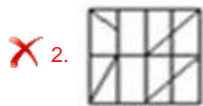
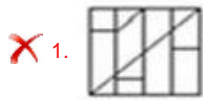
Q.3

Choose the option figure in which the problem figure is hidden/embedded.

Question figure:



Ans



Question ID : 9895809269
Chosen Option : 3

Q.4 Select the correct option that will fill in the blank and complete the series.

173, 182, 198, 223, 259, _____

- Ans 1. 301
 2. 308
 3. 315
 4. 282

Question ID : 9895809261
Chosen Option : 2

Q.5 The statements below are followed by two conclusions labeled I and II. Assuming that the information in the statements is true, even if it appears to be at variance with generally established facts, decide which conclusion(s) logically and definitely follow(s) from the information given in the statements.

Statements:

All tents are houses.

All houses are bricks.

All bricks are stones.

Conclusions:

I. All bricks are houses.

II. Some stones are tents.

- Ans 1. Only conclusion II follows
 2. Only conclusion I follows
 3. Neither I nor II follows
 4. Either I or II follows

Question ID : 9895809260
Chosen Option : 3

Q.6 The heights of A and B are equal. C is shorter than A; D is shorter than E, but taller than B. Who is the tallest of all?

Ans

- 1. B
- 2. C
- 3. D
- 4. E

Question ID : 9895809258
Chosen Option : 4

Q.7 Find the missing number in the given analogy.

$$16 : 240 :: ? : 182$$

- Ans
- 1. 18
 - 2. 14
 - 3. 13
 - 4. 12

Question ID : 9895809263
Chosen Option : 2

Q.8 Select the option that is related to the third term in the same way as the second term is related to the first term.

BotH : NotT :: FotL : ?

- Ans
- 1. RotD
 - 2. RotT
 - 3. RotX
 - 4. AotH

Question ID : 9895809253
Chosen Option : 3

Q.9 If '+' means '÷', '-' means '×', '×' means '+', and '÷' means '-', then:

$$64 - 81 + 9 \times 4 = ?$$

- Ans
- 1. 570
 - 2. 630
 - 3. 580
 - 4. 510

Question ID : 9895809266
Chosen Option : 3

Q.10 Select the correct option that will fill in the blank and complete the series.

471, 479, 452, 516, 391, _____

- Ans
- 1. 508
 - 2. 627
 - 3. 616
 - 4. 607

Question ID : 9895809262
Chosen Option : 2

Q.1 Four words have been given out of which three are alike in some manner, while one is different. Choose the odd one.

- Ans
- 1. Proteins
 - 2. Drink
 - 3. Carbohydrates
 - 4. Fats

Question ID : 9895809250
Chosen Option : 2


Q.1 Four letter clusters have been given, out of which three are alike in some manner, while one is different. Choose the odd one.

- Ans
- 1. KAR
 - 2. UFA
 - 3. IVO
 - 4. ACE

Question ID : 9895809249
Chosen Option : 4

Q.1 Choose the option which completes the given figure series.

PROBLEM FIGURES



- Ans
- 1.
 - 2.
 - 3.
 - 4.

Question ID : 9895809267
Chosen Option : 2

Q.1 The statements below are followed by two conclusions labeled I and II. Assuming that the information in the statements is true, even if it appears to be at variance with generally established facts, decide which conclusion(s) logically and definitely follow(s) from the information given in the statements.

Statements:

1. All keys are locks.
2. All locks are screws.
3. All doors are keys.

Conclusions:

- I. All screws are keys.
- II. Some locks are keys.

- Ans
- 1. Only conclusion II follows
 - 2. Either conclusion I or II follows

3. Neither conclusion I nor II follows
4. Only conclusion I follows

Question ID : 9895809259
Chosen Option : 1

Q.1
5 If IECGF is written as 95376 and CAHJ as 31810, how will QGMVJ be written?

- Ans
1. 177132209
 2. 177132208
 3. 177122910
 4. 177132210

Question ID : 9895809255
Chosen Option : 4

Q.1
6 K, L, M, N, O, P and Q are sitting along a circular table facing the centre.

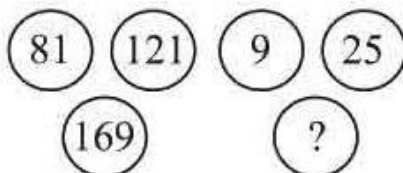
- (i) L sits between N and O.
- (ii) K is third to the left of O.
- (iii) Q is second to the left of M, who is to the immediate left of P.

Which is the correct position of L with respect of Q?

- Ans
1. Second to the right
 2. First to the left
 3. First to the right
 4. Second to the left

Question ID : 9895809256
Chosen Option : 4

Q.1
7 Find the missing number from the below options.

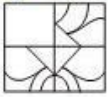


- Ans
1. 49
 2. 81
 3. 16
 4. 36

Question ID : 9895809265
Chosen Option : 1

Q.1
8 Which of the following answer figure will complete the given figure?

Question figure:



Ans



Question ID : 9895809268
Chosen Option : 3

Q.1
9 Four options have been given out of which three are alike in some manner, while one is different. Choose the odd one.

- Ans 1. 446
 2. 824
 3. 259
 4. 617

Question ID : 9895809264
Chosen Option : 3

Q.2
0 A, B, C, D, E and F are sitting along the circle facing the centre.

- (i) B is an immediate neighbour of D.
(ii) C is an immediate neighbour of A but is not an immediate neighbour of F.
(iii) A is to the immediate left of B.

What is the position of E?

- Ans 1. To the immediate left of B
2. Between A and B
3. To the immediate right of C
4. Second to the right of D

Question ID : 9895809257
Chosen Option : 3

Q.2
1 Select the related word pair from the given alternatives.





Glue : Paper :: _____ : _____

- Ans
- 1. Notebook : Colour
 - 2. Test : Notice board
 - 3. Cement : brick
 - 4. Paper : Wrapper

Question ID : 9895809252
Chosen Option : 3

Q.2
2 Select the Venn diagram that best illustrates the relationship between the three given classes.

Pens, Pencils , Books

- Ans
- 1. 
 - 2. 
 - 3. 
 - 4. 

Question ID : 9895809272
Chosen Option : 2

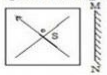
Q.2
3 In a certain code, SEVEN is coded as TFWFO, then how is NINE coded in the same way?



- Ans
- 1. OJOF
 - 2. OFJO
 - 3. OJFO
 - 4. OOJF

Question ID : 9895809254
Chosen Option : 1

Q.2
4 Choose the option that most closely resembles the mirror image of the given figure when mirror is placed at right side.

Question figure:



- Ans
- 1. 
 - 2. 

✗ 3.



✓ 4.



Question ID : 9895809270
Chosen Option : 1

Q.2 Select the related word pair from the given alternatives.

5

Pond : Lake :: _____ : _____

Ans

- ✓ 1. Hill : Mountain
- ✗ 2. Church : Religion
- ✗ 3. Stethoscope : Machine
- ✗ 4. Gold : Ornament

Question ID : 9895809251
Chosen Option : 1

Q.2 Which of the following rivers does NOT flow into the Arabian sea?

6

Ans

- ✗ 1. Narmada
- ✗ 2. Sabarmati
- ✓ 3. Tungabhadra
- ✗ 4. Mandovi

Question ID : 9895809437
Chosen Option : 3

Q.2 Which bacteria is responsible for the formation of curd?

7

Ans

- ✗ 1. Bacillus radicolica
- ✗ 2. Lactobacillus aureus
- ✗ 3. Micrococcus
- ✓ 4. Lactobacillus acidophilus

Question ID : 9895809431
Chosen Option : 4

Q.2 In the 2018 Union budget of India, what was the proportion of MSP (minimum support price) of agriculture products?

8

Ans

- ✓ 1. 1.7 times the market rate
- ✗ 2. 1.9 times the market rate
- ✗ 3. 2.0 times the market rate
- ✗ 4. 1.5 times the market rate

Question ID : 9895809445
Chosen Option : 4

Q.2

9 Keisabadi is a form of folk dance of _____ state in which only men can take part.

- Ans
1. Rajasthan
 2. Odisha
 3. Telangana
 4. Sikkim

Question ID : 9895809425
Chosen Option : 3

Q.3 The _____ and ideals of the Indian Constitution are reflected in the Preamble to the Constitution of India.

- Ans
1. Philosophy
 2. Laws
 3. Policies
 4. Acts

Question ID : 9895809440
Chosen Option : 2

Q.3 The share of the tertiary sector to the GDP has increased but the contribution of which sector to employment is the highest at present?

- Ans
1. Secondary
 2. Industry
 3. Information technology
 4. Primary

Question ID : 9895809447
Chosen Option : 4

Q.3 What is mandatory for any entity entering into a financial transaction of ₹ 2.5 lakh or more?

- Ans
1. PAN card
 2. Licence
 3. Aadhaar card
 4. Passport

Question ID : 9895809446
Chosen Option : 4

Q.3 Who has been renominated as the Chairman of the Lok Sabha Ethics Committee?

- Ans
1. LK Advani
 2. Ramesh Pokhriyal
 3. Sumitra Mahajan
 4. Chandrakant Khaire

Question ID : 9895809428
Chosen Option : 4

Q.3 Who won the Badminton World Federation World Tour Finals Tournament in December 2018?

Ans

1. Mahesh Bhupati
2. PV Sindhu
3. Nozomi Okuhara
4. Saina Nehwal

Question ID : 9895809430
Chosen Option : 2

Q.3
5 The deficiency of vitamin-A results in:

- Ans
1. rickets
 2. scurvy
 3. night blindness
 4. hair fall

Question ID : 9895809433
Chosen Option : 3

Q.3
6 The Lohri festival is mainly related to which state?

- Ans
1. Maharastra
 2. Uttar Pradesh
 3. Punjab
 4. Goa

Question ID : 9895809424
Chosen Option : 3

Q.3
7 Which of the following European countries is called 'the land of a thousand lakes'?

- Ans
1. Sweden
 2. Finland
 3. Norway
 4. Estonia

Question ID : 9895809423
Chosen Option : 2

Q.3
8 Who started the Bhoodan Movement or The Land Gift Movement in 1951?

- Ans
1. Indira Gandhi
 2. Vinobha Bhave
 3. Acharya Narendra Dev
 4. Mahatma Gandhi

Question ID : 9895809436
Chosen Option : 2

Q.3
9 The city of Dhillika (Delhi) was founded by the:

- Ans
1. Pariharas
 2. Chauhans

- 3. Pawars
- 4. Tomars

Question ID : 9895809443
Chosen Option : 2

Q.4
0 _____ is the most abundant element in the earth's crust.

- Ans
- 1. Carbon dioxide
 - 2. Hydrogen
 - 3. Silicon
 - 4. Oxygen

Question ID : 9895809434
Chosen Option : 1

Q.4
1 Which of the following rulers were closely associated with Yuehzi nomadic people?

- Ans
- 1. Dinnaga
 - 2. Shaka
 - 3. Pahalva
 - 4. Kushana

Question ID : 9895809442
Chosen Option : 3

Q.4
2 What is the 'Agenda 21' of the Rio Summit 1992 related to?

- Ans
- 1. Technology transfer mechanism to developing countries for 'clean – energy' production
 - 2. Sustainable development
 - 3. Combating the consequences of population explosion
 - 4. Mitigation norms of GHGs emission

Question ID : 9895809435
Chosen Option : 3

Q.4
3 Bees must collect nectar from approximately how many flowers to make one pound of honey?

- Ans
- 1. 20 million
 - 2. 10 thousand
 - 3. 50 milion
 - 4. 2 million

Question ID : 9895809432
Chosen Option : 1

Q.4
4 Article 368 is related to:

- Ans
- 1. centre-state relations
 - 2. constitutional amendments
 - 3. the Supreme Court

4. a state government

Question ID : 9895809441
Chosen Option : 1

Q.4
5 Whom does the constitution empower for the admission or establishment of new states?

- Ans 1. State Government
 2. Supreme Court
 3. Parliament
 4. Central Government

Question ID : 9895809439
Chosen Option : 4

Q.4
6 Who among the following was the first Indian woman to receive the Nobel Peace prize?

- Ans 1. Mother Teresa
 2. Nargis Dutt
 3. Indira Gandhi
 4. Sarojini Naidu

Question ID : 9895809427
Chosen Option : 1

Q.4
7 Which Indian IT expert is called 'the father of the Pentium processor'?

- Ans 1. Vinod Dham
 2. Biswamohan Pani
 3. Ajay Bhatt
 4. Anand Chandrasheker

Question ID : 9895809426
Chosen Option : 3

Q.4
8 Where did the first Asian Games begin?

- Ans 1. China
 2. Sri Lanka
 3. India
 4. Nepal

Question ID : 9895809429
Chosen Option : 3

Q.4
9 The pioneer of communism in India was:

- Ans 1. S. A Dange
 2. M. N Roy
 3. Nalin Gupta
 4. M. R Jayakar

Question ID : 9895809444
Chosen Option : 2

Q.5
0 Which of the following is the highest peak of Vindhya Range?

- Ans 1. Kalumar Peak
 2. Mahendragiri
 3. Pachmarhi
 4. Gurushikhar

Question ID : 9895809438
Chosen Option : 2

Q.5
1 Study the following table carefully and answer the questions given below it.
Number of candidates appearing for an interview for a post in Bank and percentage of candidates qualifying

Banks	Candidates Appearing	% of Candidates Qualifying
A	1500	14
B	2200	26
C	3000	17
D	980	20
E	1200	28
F	2500	21

What was the average number of candidates who appeared for the interview in bank A, C and E together?

- Ans 1. 2000
 2. 1800
 3. 1900
 4. 1500

Question ID : 9895809622
Chosen Option : 3

Q.5
2 A sell an article to B at a gain of 5% and B sell it to C at a gain of 10%. If C paid ₹ 462, what did it cost A?

- Ans 1. ₹ 400
 2. ₹ 500
 3. ₹ 480
 4. ₹ 320

Question ID : 9895809606
Chosen Option : 1

Q.5
3 The radius of in-circle of a triangle is 4 cm and the perimeter of the triangle is 20 cm. What is the area of the triangle?

- Ans 1. 40 sq. cm
 2. 36 sq. cm
 3. 80 sq. cm
 4. 20 sq. cm

Question ID : 9895809618
Chosen Option : 2

Q.5 A room is in the shape of cube and the length of the longest rod placed in it is $12\sqrt{3}$ m. The area of the floor is:

- Ans
- 1. 36 sq. m
 - 2. 144 sq. m
 - 3. 64 sq. m
 - 4. 96 sq. m

Question ID : 9895809619
Chosen Option : 2

Q.5 What is the maximum number of students among whom 63 pens and 140 copies can be distributed in such a way that each student gets the same number of pens and same number of exercise books?

- Ans
- 1. 5
 - 2. 2
 - 3. 7
 - 4. 3

Question ID : 9895809598
Chosen Option : 3

Q.5 A train passes a 60 metres long platform in 20 seconds and a man standing on the platform in 16 seconds. The speed of the train is:

- Ans
- 1. 40 kmph
 - 2. 50 kmph
 - 3. 38 kmph
 - 4. 54 kmph

Question ID : 9895809616
Chosen Option : 2

Q.5 Study the following table carefully and answer the questions given below it.

7 Number of candidates appearing for an interview for a post in Bank and percentage of candidates qualifying

Banks	Candidates Appearing	% of Candidates Qualifying
A	1500	14
B	2200	26
C	3000	17
D	980	20
E	1200	28
F	2500	21

What was the respective ratio of the number of candidates who qualified in bank A to the number of candidates who qualified in bank E?

- Ans
- 1. 5 : 6
 - 2. 2 : 5
 - 3. 3 : 7
 - 4. 5 : 8

Question ID : 9895809621
Chosen Option : 4

Q.5

8 A man travels from A to B at a speed of 50 km/hr and returns to A by increasing his speed by 30%. What is his average speed during the whole journey?

- Ans
- 1. $56\frac{12}{23}$ km/hr
 - 2. $57\frac{1}{2}$ km/hr
 - 3. $56\frac{2}{3}$ km/hr
 - 4. $52\frac{1}{3}$ km/hr

Question ID : 9895809615
Chosen Option : 2

Q.5 Study the following table carefully and answer the questions given below it.
9 Number of candidates appearing for an interview for a post in a Bank and percentage of candidates qualifying

Banks	Candidates Appearing	% of Candidates Qualifying
A	1500	14
B	2200	26
C	3000	17
D	980	20
E	1200	28
F	2500	21

The number of candidates who did not qualify in bank D was approximately what percent of the candidates who did not qualify in bank B?

- Ans
- 1. 51
 - 2. 42
 - 3. 48
 - 4. 44

Question ID : 9895809620
Chosen Option : 3

Q.6
0 What sum will fetch a simple interest of ₹ 25,410 in five and a half years at 6% p.a. rate of interest?

- Ans
- 1. ₹ 77,000
 - 2. ₹ 88,000
 - 3. ₹ 70,000
 - 4. ₹ 55,000

Question ID : 9895809611
Chosen Option : 2

Q.6
1 75% of a number x is equal to $\frac{2}{5}$ of another number y. What is the ratio between x and y?

- Ans
- 1. 1 : 5
 - 2. 13 : 8
 - 3. 8 : 15
 - 4. 1 : 3

Question ID : 9895809610
Chosen Option : 3

Q.6
2 The compound interest on a certain sum at 4% per annum (compounded annually) for 2 years is ₹ 102. On the same principal at the same rate for the same time, the simple interest will be:

- Ans
1. ₹ 100
 2. ₹ 99
 3. ₹ 98
 4. ₹ 101

Question ID : 9895809612
Chosen Option : 2

Q.6
3 If the cost price of an article is ₹ 200 and selling price of the same article is ₹ 225. Find the profit %.

- Ans
1. 15%
 2. 12.5%
 3. 25%
 4. 16%

Question ID : 9895809607
Chosen Option : 2

Q.6
4 $\sqrt{729} \times 56 \div 8 = ?$

- Ans
1. 198
 2. 138
 3. 189
 4. 142

Question ID : 9895809600
Chosen Option : 3

Q.6
5 Two numbers A and B are respectively 10% and 25% more than third number respectively. What is the ratio of A and B?

- Ans
1. 13 : 16
 2. 11 : 12
 3. 22 : 25
 4. 15 : 16

Question ID : 9895809609
Chosen Option : 1

Q.6
6 The average of two numbers is 6 and that of another three numbers is 8. The average of these five numbers is:

- Ans
1. 6.5
 2. 7.6
 3. 7.2
 4. 5.5

Question ID : 9895809601
Chosen Option : 3

Q.6
7 If 12 men can do a job in 7 days, what fraction of the job can be done by one man in one day?

- Ans
- 1. $\frac{1}{12}$
 - 2. $\frac{7}{12}$
 - 3. $\frac{1}{84}$
 - 4. $\frac{12}{7}$

Question ID : 9895809613
Chosen Option : 4

Q.6
8 The marked price of a radio is ₹ 480. The shopkeeper allows a discount of 10% and still gains 8%. If no discount is allowed, then his gain percent is:

- Ans
- 1. 35%
 - 2. 20%
 - 3. 15%
 - 4. 25%

Question ID : 9895809603
Chosen Option : 4

Q.6
9 If 20% of P = 30% of Q = $\frac{1}{6}$ of R, then P : Q : R is equal to:

- Ans
- 1. 1 : 2 : 4
 - 2. 5 : 10 : 6
 - 3. 15 : 10 : 18
 - 4. 2 : 5 : 8

Question ID : 9895809608
Chosen Option : 3

Q.7
0 If two pipes function simultaneously, a tank is filled in 12 hours. One pipe fills the tank 10 hours faster than the other. How many hours does the faster pipe alone take to fill the tank?

- Ans
- 1. 12
 - 2. 20
 - 3. 15
 - 4. 18

Question ID : 9895809614
Chosen Option : 3

Q.7
1 In a family of 4 members, if father earns ₹ 50,000, mother earns ₹ 32,000, son ₹ 25,000 and daughter monthly earns ₹ 20000 in a month, then the average income of family is given by:

- Ans
- 1. ₹ 31000

2. ₹ 28000

3. ₹ 32000

4. ₹ 31750

Question ID : 9895809602

Chosen Option : 4

Q.7
2 The value of the following expression:

150% of 15 + 75% of 75 is

Ans

1. 135

2. 78.75

3. 138

4. 75.75

Question ID : 9895809605

Chosen Option : 2

Q.7
3 If a carpenter increases each edge of a square wooden piece from 42 cm to 45 cm, the cost of wood is increased by ₹ 783. What is the rate of wood per sq. cm?

Ans

1. ₹ 3

2. ₹ 4

3. ₹ 4.5

4. ₹ 5

Question ID : 9895809617

Chosen Option : 1

Q.7
4 What is the Mode of the following data:

X	32	14	59	41	28	7	34	20
f(x)	8	4	12	8	10	16	15	9

Ans

1. 28

2. 14

3. 7

4. 59

Question ID : 9895809604

Chosen Option : 3

Q.7
5 $36 \times 15 - 56 \times 784 \div 112 = ?$

Ans

1. 158

2. 138

3. 148

4. 238

Question ID : 9895809599

Section : English Language

Q.1 Select the word which means the same as the group of words given.

A person giving too much attention to small details and wanting perfection.

- Ans
- 1. Studious
 - 2. Fanatic
 - 3. Fastidious
 - 4. Gullible

Question ID : 9895809795
Chosen Option : 1

Q.2 Select the antonym of the given word.

CONCISE

- Ans
- 1. Short
 - 2. Lengthy
 - 3. Succinct
 - 4. Brief

Question ID : 9895809790
Chosen Option : 2

Q.3 Select the most appropriate word to fill in the blank.

Finally, the prizes were _____ to all successful participants by the chief guest.

- Ans
- 1. distributed
 - 2. provided
 - 3. shared
 - 4. divided

Question ID : 9895809799
Chosen Option : 1

Q.4 Select the word which means the same as the group of words given.

A short interesting incident about a person

- Ans
- 1. Anecdote
 - 2. Drama
 - 3. Ballad
 - 4. Epitaph

Question ID : 9895809794
Chosen Option : 1

Q.5 Select the most appropriate word to fill in the blank.

As this Principal adopts a _____ approach towards the running of the school, the school is losing its prestige.

- Ans
- 1.

- 2. dilute
- 3. strict
- 4. casual

Question ID : 9895809798
Chosen Option : 2

Q.6 Select the meaning of the given idiom.

Miss the boat

- Ans 1. To miss the chance
- 2. To take a risk
 - 3. To miss someone
 - 4. To drown

Question ID : 9895809793
Chosen Option : 4

Q.7 Select the meaning of the given idiom.

To burn one's fingers

- Ans 1. To have an unfavourable result
- 2. To undergo pain
 - 3. To behave as if one is important
 - 4. To touch something hot

Question ID : 9895809792
Chosen Option : 2

Q.8 Select the most appropriate word to fill in the blank.

Most of the Himalayan rivers are perennial: they have water _____ the year.

- Ans 1. between
- 2. throughout
 - 3. along
 - 4. across

Question ID : 9895809781
Chosen Option : 2

Q.9 Select the synonym of the given word.

ABUNDANT

- Ans 1. Plentiful
- 2. Inadequate
 - 3. Lacking
 - 4. Scanty

Question ID : 9895809788

Q.1
0 Select the wrongly spelt word.

- Ans
- 1. Maneuver
 - 2. Maintenance
 - 3. Mathematics
 - 4. Liason

Question ID : 9895809797
Chosen Option : 2

Q.1
1 Select the most appropriate option to substitute the underlined segment in the given sentence. If there is no need to substitute it, select No substitution required.

The Deccan Plateau is a triangular landmass that lies to the south of the river Narmada.

- Ans
- 1. No substitution required
 - 2. are a triangle
 - 3. has a triangular
 - 4. are a mass

Question ID : 9895809779
Chosen Option : 2

Q.1
2 Select the wrongly spelt word.

- Ans
- 1. Prominent
 - 2. Professor
 - 3. Laboratory
 - 4. Knowlege

Question ID : 9895809796
Chosen Option : 4

Q.1
3 Select the most appropriate option to substitute the underlined segment in the given sentence. If there is no need to substitute it, select No substitution required.

The sun rises two hours earliest in Arunachal Pradesh as compared to Gujarat.

- Ans
- 1. two hours earlier
 - 2. two hour early
 - 3. two hours' early
 - 4. No substitution required

Question ID : 9895809777
Chosen Option : 1

Q.1
4 Identify the segment in the sentence which contains the grammatical error from the given options.

Agriculture is main occupation of the people living in the plains.

- Ans
- 1. living in
 - 2. is main occupation

3. the plains
 4. of the people

Question ID : 9895809775
Chosen Option : 3

Q.1 5 Identify the segment in the sentence which contains the grammatical error from the given options.

India's relations with most countries of the world have remained cordial across the years.

- Ans 1. with most countries
 2. across the years
 3. India's relations
 4. of the world

Question ID : 9895809776
Chosen Option : 2

Q.1 6 Select the antonym of the given word.

DESPISE

- Ans 1. Dislike
 2. Contempt
 3. Hate
 4. Admire

Question ID : 9895809791
Chosen Option : 4

Q.1 7 Select the synonym of the given word.

ENORMOUS

- Ans 1. Tiny
 2. Huge
 3. Dwarf
 4. Negligible

Question ID : 9895809789
Chosen Option : 2

Q.1 8 Select the most appropriate word to fill in the blank.

The Chilika Lake is the _____ salt water lake in India.

- Ans 1. largest
 2. large
 3. more larger
 4. larger

Question ID : 9895809780
Chosen Option : 1

Q.1 Select the most appropriate option to substitute the underlined segment in the given sentence. If there is no need to substitute it, select No substitution required.

9

The Himalayas represent one of the more rugged mountain barriers of the world.

- Ans
- 1. one in the most
 - 2. one of the most
 - 3. No substitution required
 - 4. the more

Question ID : 9895809778
Chosen Option : 2

Comprehension:

In the following passage some words have been deleted. Fill in the blanks with the help of the alternatives given. Select the most appropriate option for each number.

The Narmada (1) _____ from the Amarkantak hills in Madhya Pradesh. It flows (2) _____ the west in a rift valley (3) _____ due to faulting. On its (4) _____ to the sea, the Narmada creates many (5) _____ locations.

SubQuestion No : 20

Q.2 Select the most appropriate option that will fill in the blank number 1.

0

- Ans
- 1. heads
 - 2. creates
 - 3. originates
 - 4. resides

Question ID : 9895809783
Chosen Option : 3

Comprehension:

In the following passage some words have been deleted. Fill in the blanks with the help of the alternatives given. Select the most appropriate option for each number.

The Narmada (1) _____ from the Amarkantak hills in Madhya Pradesh. It flows (2) _____ the west in a rift valley (3) _____ due to faulting. On its (4) _____ to the sea, the Narmada creates many (5) _____ locations.

SubQuestion No : 21

Q.2 Select the most appropriate option that will fill in the blank number 2.

1

- Ans
- 1. across
 - 2. facing
 - 3. against
 - 4. towards

Comprehension:

In the following passage some words have been deleted. Fill in the blanks with the help of the alternatives given. Select the most appropriate option for each number.

The Narmada (1) _____ from the Amarkantak hills in Madhya Pradesh. It flows (2) _____ the west in a rift valley (3) _____ due to faulting. On its (4) _____ to the sea, the Narmada creates many (5) _____ locations.

SubQuestion No : 22

Q.2
2 Select the most appropriate option that will fill in the blank number 3.

- Ans
- 1. forming
 - 2. form
 - 3. formed
 - 4. formation

Comprehension:

In the following passage some words have been deleted. Fill in the blanks with the help of the alternatives given. Select the most appropriate option for each number.

The Narmada (1) _____ from the Amarkantak hills in Madhya Pradesh. It flows (2) _____ the west in a rift valley (3) _____ due to faulting. On its (4) _____ to the sea, the Narmada creates many (5) _____ locations.

SubQuestion No : 23

Q.2
3 Select the most appropriate option that will fill in the blank number 4.

- Ans
- 1. road
 - 2. movement
 - 3. approach
 - 4. way

Comprehension:

In the following passage some words have been deleted. Fill in the blanks with the help of the alternatives given. Select the most appropriate option for each number.

The Narmada (1) _____ from the Amarkantak hills in Madhya Pradesh. It flows (2) _____ the west in a rift valley (3) _____ due to faulting. On its (4) _____ to the sea, the Narmada creates many (5) _____ locations.

SubQuestion No : 24

Q.2
4 Select the most appropriate option that will fill in the blank number 5.

- Ans
1. specific
 2. plain
 - ✓ 3. scenic
 - ✗ 4. ornamental

Question ID : 9895809787
Chosen Option : 1

Q.2
5 Identify the segment in the sentence which contains the grammatical error from the given options.

Human activities is leading to the gradual destruction of the rainforests.

- Ans
1. the gradual
 2. is leading
 3. Human activities
 4. the rainforests

Question ID : 9895809774
Chosen Option : 1

Section : Hindi Language

Q.1 'प्रेम' शब्द का विलोम शब्द है-

- Ans
1. स्नेह
 2. ईर्ष्या
 3. घृणा
 - ✗ 4. जलन

Question ID : 9895807193
Chosen Option : --

Q.2 'हाथ पाँव फूलना' मुहावरे का अर्थ है-

- Ans
1. भय से घबराना
 2. गुस्सा होना
 3. बीमार होना

✗ 4. भाग जाना

Question ID : 9895807198
Chosen Option : --

Q.3 'जिसको ईश्वर में विश्वास हो' के लिए एक शब्द है -

Ans

1. सेवक
2. आस्तिक
- ✓ 3. भक्त
4. पुजारी

Question ID : 9895807199
Chosen Option : --

Q.4 दिए गए वाक्य का वह भाग ज्ञात करें जिसमें कोई त्रुटि है।

कुछ प्रचलित बैंकिंग शब्दों को ज्यों-त्यों अपनाया गया है।

Ans

1. ज्यों-त्यों
2. कुछ प्रचलित
3. अपनाया गया है।
4. बैंकिंग शब्दों को

Question ID : 9895807179
Chosen Option : --

Q.5 सही वर्तनी वाले शब्द का चयन करें।

Ans

1. आदरणीय
2. आदरणिय
3. अदरणीय
4. अदरणिय

Question ID : 9895807202
Chosen Option : --

Q.6 रिक्त स्थान को भरने के लिए उपयुक्त शब्द का चयन करें।

भूखे को तो चन्द्र और सूर्य भी केवल आटे की बड़ी-बड़ी दो _____ से प्रतीत होते हैं।

Ans

1. रोटियों
2. गेंद
3. गुड़ियाँ
4. गोलियाँ

Question ID : 9895807185
Chosen Option : --

Q.7 सही वर्तनी वाले शब्द का चयन करें।

- Ans
1. सभापती
 2. साभापति
 3. सभीपति
 4. सभापति

Question ID : 9895807201

Chosen Option : --

Q.8 'जो बहुत कम जानता हो' के लिए एक शब्द है-

- Ans
1. अल्पज्ञ
 2. बुद्धिहीन
 3. अज्ञानी
 4. मूर्ख

Question ID : 9895807200

Chosen Option : --

Comprehension:

निम्नलिखित गद्यांश के रिक्त स्थानों की पूर्ति गद्यांश के नीचे दिए गए प्रश्नों के अनुसार कीजिए-

किसी भी राष्ट्र के कुछ _____ (1) प्रतीक, यथा ध्वज, गान आदि जैसे महत्वपूर्ण चिह्न होते हैं, जिनसे एक _____ (2) देश अपनी अस्मिता और प्रभुसत्ता उद्घोषित करता है और इससे ही वह _____ (3) आदर एवं विश्वास प्राप्त करता है। _____ (4) चिह्न हमारे देश की विशिष्ट मोहर हैं। यह देश-प्रेमियों के कुछ विचारों और मूल्यों का _____ (5) भी होता है।

SubQuestion No : 9

Q.9 गद्यांश में संकेतित रिक्त स्थान (1) के लिए उपयुक्त शब्द होगा।

- Ans
1. अवशिष्ट
 2. अशिष्ट
 3. विशिष्ट
 4. शिष्ट

Question ID : 9895807188

Chosen Option : --

Comprehension:

निम्नलिखित गद्यांश के रिक्त स्थानों की पूर्ति गद्यांश के नीचे दिए गए प्रश्नों के अनुसार कीजिए-

किसी भी राष्ट्र के कुछ _____ (1) प्रतीक, यथा ध्वज, गान आदि जैसे महत्वपूर्ण चिह्न होते हैं, जिनसे एक _____ (2) देश अपनी अस्मिता और प्रभुसत्ता उद्घोषित करता है और इससे ही वह _____ (3) आदर एवं विश्वास प्राप्त करता है। _____ (4) चिह्न हमारे देश की विशिष्ट मोहर हैं। यह देश-प्रेमियों के कुछ विचारों और मूल्यों का _____ (5) भी होता है।

SubQuestion No : 10

Q.1
0 गद्यांश में संकेतित रिक्त स्थान (2) के लिए उपयुक्त शब्द होगा।

- Ans
1. लोकतंत्र
 2. स्वतंत्र
 3. परतंत्र
 4. राजतंत्र

Question ID : 9895807189
Chosen Option : --

Comprehension:

निम्नलिखित गद्यांश के रिक्त स्थानों की पूर्ति गद्यांश के नीचे दिए गए प्रश्नों के अनुसार कीजिए-

किसी भी राष्ट्र के कुछ _____ (1) प्रतीक, यथा ध्वज, गान आदि जैसे महत्वपूर्ण चिह्न होते हैं, जिनसे एक _____ (2) देश अपनी अस्मिता और प्रभुसत्ता उद्घोषित करता है और इससे ही वह _____ (3) आदर एवं विश्वास प्राप्त करता है। _____ (4) चिह्न हमारे देश की विशिष्ट मोहर हैं। यह देश-प्रेमियों के कुछ विचारों और मूल्यों का _____ (5) भी होता है।

SubQuestion No : 11

Q.1
1 गद्यांश में संकेतित रिक्त स्थान (3) के लिए उपयुक्त शब्द होगा।

- Ans
1. सार्वजनिक
 2. भौतिक
 3. शारीरिक
 4. ऐकान्तिक

Question ID : 9895807190
Chosen Option : --

Comprehension:

निम्नलिखित गद्यांश के रिक्त स्थानों की पूर्ति गद्यांश के नीचे दिए गए प्रश्नों के अनुसार कीजिए-

किसी भी राष्ट्र के कुछ _____ (1) प्रतीक, यथा ध्वज, गान आदि जैसे महत्वपूर्ण चिह्न होते हैं, जिनसे एक _____ (2) देश अपनी अस्मिता और प्रभुसत्ता उदघोषित करता है और इससे ही वह _____ (3) आदर एवं विश्वास प्राप्त करता है। _____ (4) चिह्न हमारे देश की विशिष्ट मोहर हैं। यह देश-प्रेमियों के कुछ विचारों और मूल्यों का _____ (5) भी होता है।

SubQuestion No : 12

Q.1
2 गद्यांश में संकेतित रिक्त स्थान (4) के लिए उपयुक्त शब्द होगा।

- Ans
1. नागरिक
 2. शहरी
 3. राष्ट्रीय
 - ✗ 4. ग्रामीण

Question ID : 9895807191
Chosen Option : --

Comprehension:

निम्नलिखित गद्यांश के रिक्त स्थानों की पूर्ति गद्यांश के नीचे दिए गए प्रश्नों के अनुसार कीजिए-

किसी भी राष्ट्र के कुछ _____ (1) प्रतीक, यथा ध्वज, गान आदि जैसे महत्वपूर्ण चिह्न होते हैं, जिनसे एक _____ (2) देश अपनी अस्मिता और प्रभुसत्ता उदघोषित करता है और इससे ही वह _____ (3) आदर एवं विश्वास प्राप्त करता है। _____ (4) चिह्न हमारे देश की विशिष्ट मोहर हैं। यह देश-प्रेमियों के कुछ विचारों और मूल्यों का _____ (5) भी होता है।

SubQuestion No : 13

Q.1
3 गद्यांश में संकेतित रिक्त स्थान (5) के लिए उपयुक्त शब्द होगा।

- Ans
1. समीप
 - ✗ 2. प्रताप
 3. प्रतीक
 - ✗ 4. समान

Question ID : 9895807192
Chosen Option : --

रिक्त स्थान को भरने के लिए उपयुक्त शब्द का चयन करें।

मैंने भाषण नहीं सुना _____ वह मेरे काम का नहीं था।

Ans

1. अर्थात्
2. कि
3. क्योंकि
4. इसीलिए

Question ID : 9895807183
Chosen Option : --

Q.1
5 'माता' का पर्यायवाची शब्द है-

Ans

1. जननी
2. माही
3. स्त्री
4. वनिता

Question ID : 9895807195
Chosen Option : --

Q.1
6 दिए गए वाक्य का वह भाग ज्ञात करें जिसमें कोई त्रुटि है।

विद्वानों का अतिरिक्त विद्यार्थियों द्वारा भी कोश का प्रयोग किया जा सकता है।

Ans

1. विद्यार्थियों द्वारा भी
2. विद्वानों का अतिरिक्त
3. कोश का प्रयोग
4. किया जा सकता है।

Question ID : 9895807178
Chosen Option : --

Q.1
7 'वन' का पर्यायवाची शब्द है-

Ans

1. कानन
2. भूदेव
3. भूपति
4. विटप

Question ID : 9895807196
Chosen Option : --

Q.1
8 दिए गए वाक्य में रेखांकित खंड को प्रतिस्थापित करने के लिए उपयुक्त विकल्प का चयन करें।

उस जलस्रोत को देखकर मेरा चित्त प्रफुल्ल हो गया।

Ans

1. व्यथित

2. खिन्न
3. पीड़ित
- ✓ 4. प्रसन्न

Question ID : 9895807181
Chosen Option : --

Q.1 दिए गए वाक्य में रेखांकित खंड को प्रतिस्थापित करने के लिए उपयुक्त विकल्प का चयन करें।

कैकयी का हृदय अत्यन्त निष्ठुर था।

- Ans
1. कुठार
 2. कठोर
 3. कठिन
 4. कर्कश

Question ID : 9895807180
Chosen Option : --

Q.2 'शिष्ट' शब्द का विलोम शब्द है-

- Ans
- ✗ 1. दुर्जन
 2. शालीन
 3. विशिष्ट
 4. अशिष्ट

Question ID : 9895807194
Chosen Option : --

Q.2 'इंके की चोट पर कहना' मुहावरे का अर्थ है-

- Ans
1. क्रोधित होकर कहना
 2. खुलेआम कहना
 3. जोर से बोलना
 4. साधारण बात को बड़ा चढ़ा कर कहना

Question ID : 9895807197
Chosen Option : --

Q.2 रिक्त स्थान को भरने के लिए उपयुक्त शब्द का चयन करें।

राम को अनुत्तीर्ण होने की _____ है।

- Ans
1. आशंका
 - ✓ 2. आशा
 - ✗ 3. प्रत्याशा
 4. संदेह

Question ID : 9895807184

Q.2
3 दिए गए वाक्य का वह भाग ज्ञात करें जिसमें कोई त्रुटि है।

यहाँ से उठकर वे अपने घर को ओर मुड़ने ही वाले थे।

Ans

1. घर को ओर
2. वे अपने
3. मुड़ने ही वाले थे।
4. यहाँ से उठकर

Question ID : 9895807177

Chosen Option : --

Q.2
4 दिए गए वाक्य में रेखांकित खंड को प्रतिस्थापित करने के लिए उपयुक्त विकल्प का चयन करें।

श्याम झगड़ालू है और दूसरों से ईर्ष्या करने वाला है।

Ans

1. ईर्ष्यालु
2. लड़ाकू
3. निंदनीय
4. झगड़ालू

Question ID : 9895807182

Chosen Option : --

Q.2
5 रिक्त स्थान को भरने के लिए उपयुक्त शब्द का चयन करें।

उत्साह एक यौगिक भाव है जिसमें साहस और आनंद का _____ रहता है।

Ans

1. विरोध
2. अंतर
3. मेल
4. जोड़

Question ID : 9895807186

Chosen Option : --

Constable (GD) in CAPFs, NIA, SSF and Rifleman (GD) in Assam Rifles Examination, 2018

Roll No. :	
Registration No.	
Name :	
Exam Venue :	iON Digital Zone iDZ Kozhikode
Exam Time :	12:30 PM - 2:00 PM
Exam Date :	09/03/2019

Section : General Section

Q.1 In a certain code, FORMAT is coded as CLOJXQ, then how is FONT coded in the same way?

- Ans
- 1. CLOQ
 - 2. CKLO
 - 3. CLKQ
 - 4. CKLQ

Question ID : 9895809279
Chosen Option : 3

Q.2 Select the Venn diagram that best illustrates the relationship between the three given classes.
Planet, Earth, Sun

- Ans
- 1. 
 - 2. 
 - 3. 
 - 4. 

Question ID : 9895809297
Chosen Option : 1

Q.3 If '+' means '×', '-' means '÷', '×' means '-', and '÷' means '+', then:

- Ans
- $664 \div 4 \div 34 \times 28 = ?$
- 1. 165
 - 2. 162
 - 3. 172
 - 4. 185

Question ID : 9895809291
Chosen Option : 3

Q.4 Select the option that is related to the third term in the same way as the second term is related to the first term.

mnnrstt : nnoostuu :: eefghhij : ?

- Ans
1. fgghiijk
 2. higfiijk
 3. ffhgiijk
 4. ffgghiijk

Question ID : 9895809278
Chosen Option : 4

Q.5 Select the related word pair from the given alternatives.

Entomology : Insects :: _____ : _____

- Ans
1. Oology : Shells
 2. Physiology : Plants
 3. Virology : Fungi
 4. Phycology : Algae

Question ID : 9895809277
Chosen Option : 1

Q.6 Anil is taller than Sunny who is shorter than Baby. Anil is taller than Bose who is shorter than Sunny. Baby is shorter than Anil. Who is the shortest?

- Ans
- ✓ 1. Bose
 - ✗ 2. Anil
 - ✗ 3. Baby
 - ✗ 4. Sunny

Question ID : 9895809283
Chosen Option : 3

Q.7 Select the correct option that will fill in the blank and complete the series.

14, 21, 42, 105, 315, ?

- Ans
- ✗ 1. 1002.5
 - ✗ 2. 1302.5
 - ✗ 3. 1202.5
 - ✓ 4. 1102.5

Question ID : 9895809286
Chosen Option : 3

Q.8 A, B, C, D, E, F and G are sitting around a circle facing at the centre. D is third to the left of A who is second to the left of F. E is not a neighbour of either F or D. C is third to left of B.

What is E's position with respect to F?

- Ans
1. Data inadequate
 2. Third to the left
 3. Second to the left
 - ✗ 4. Fourth to the left

Question ID : 9895809282
Chosen Option : 1

Q.9 Four options have been given out of which three are alike in some manner, while one is different. Choose the odd one.

- Ans 1. 14-13
 2. 13-12
 3. 11-14
 4. 08-17

Question ID : 9895809289
Chosen Option : 4

Q.1
0 Four words have been given out of which three are alike in some manner, while one is different. Choose the odd one.

- Ans 1. Proprietorship
 2. Partnership
 3. Corporation
 4. Service

Question ID : 9895809275
Chosen Option : 4

Q.1
1 Select the correct option that will fill in the blank and complete the series.

J, N, R, V, _____

- Ans 1. Z
 2. D
 3. G
 4. V

Question ID : 9895809273
Chosen Option : 3

Q.1
2 Select the related word pair from the given alternatives.

Eiffel Tower : France :: _____ : _____

- Ans 1. Opera House: China
 2. Taj Mahal : India
 3. Statue Of Liberty : Australia
 4. Alhambra : Brazil

Question ID : 9895809276
Chosen Option : 2

Q.1
3 Four letter clusters have been given, out of which three are alike in some manner, while one is different. Choose the odd one.

- Ans 1. IPQ
 2. UBC
 3. FGM
 4. RYZ

Q.1
4 Select the correct option that will fill in the blank and complete the series.

25, 100, 200, 800, 1600, ?

- Ans
- 1. 8400
 - 2. 7400
 - 3. 6400
 - 4. 6600

Q.1
5 Choose the option that most closely resembles the mirror image of the given figure when mirror is placed at right side.



- Ans
- 1.
 - 2.
 - 3.
 - 4.

Q.1
6 If RAYMOND is written as 2795431 and OLD as 461, how will DALMO be written?

- Ans
- 1. 17653
 - 2. 15764
 - 3. 17654
 - 4. 15476

Q.1
7 Select the option that is related to the Third term in the same way as the second term is related to the first term.

12 : 62 :: 14 : _____

- Ans
- 1. 72
 - 2. 80
 - 3. 70
 - 4. 75

Q.1
8 Choose the option figure in which the problem figure is hidden/embedded.

Question figure



Ans

X 1.



✓ 2.



X 3.



X 4.



Question ID : 9895809294
Chosen Option : 2

Q.1
9 The statements below are followed by two conclusions labeled I and II. Assuming that the information in the statements is true, even if it appears to be at variance with generally established facts, decide which conclusion(s) logically and definitely follow(s) from the information given in the statements.

Statements:

All houses are rivers.

All rivers are forest.

No forest is flower.

Conclusions:

I. No houses is flower.

II. No flower is houses.

Ans

1. Only conclusion II follows

2. Both Conclusions I and II follow

3. Only conclusion I follows

4. Either conclusion I or II follows

Question ID : 9895809284
Chosen Option : 4

Q.2
0 Which of the following answer figure will complete the given figure?

Question Figure:



Ans

✓ 1.



X 2.



X 3.

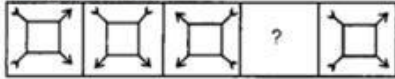


X 4.

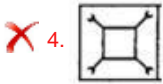
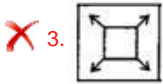
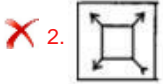
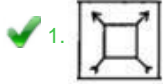


Q.2
1 Choose the option which completes the given figure series

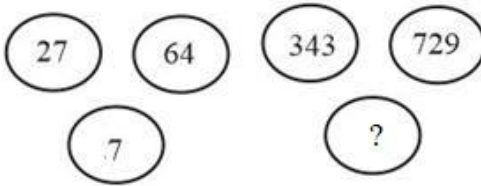
PROBLEM FIGURES



Ans



Q.2
2 Find the missing number from the below options.



- Ans
- ✗ 1. 8
 - ✗ 2. 9
 - ✗ 3. 25
 - ✓ 4. 16

Q.2
3 Mona, Kanak, John, Honey, Isha and Lara are watching a movie in a theater which has screen in the north. They are sitting in certain way.

- (i) Only Kanak is sitting between Honey and John.
- (ii) Lara is to the right of Mona who is sitting at extreme left.
- (iii) Isha is to the immediate right of John.

Who is sitting at extreme right?

- Ans
- 1. Kanak
 - 2. Honey
 - 3. John
 - 4. Isha

Q.2
4 A piece of paper is folded and cut as shown below in the question figures. From the given answer figures, how will it appear when opened?

Question figures:



Ans



Question ID : 9895809296
Chosen Option : 4

Q.2
5 The statements below are followed by two conclusions labeled I and II. Assuming that the information in the statements is true, even if it appears to be at variance with generally established facts, decide which conclusion(s) logically and definitely follow(s) from the information given in the statements.

Statements:

Some beds are chairs.

All chairs are desks.

All desks are tables.

Conclusions:

I. Some tables are beds.

II. Some desks are beds.

Ans

1. Both Conclusions I and II follow
2. Only conclusion I follows
3. Either conclusion I or II follows
4. Only conclusion II follows

Question ID : 9895809285
Chosen Option : 1

Q.2
6 'Ottamthullal' is a dance associated with the state of:

- Ans
1. Andhra Pradesh
 2. Manipur
 3. Kerala
 4. Tamil Nadu

Question ID : 9895809448
Chosen Option : 3

Q.2
7 Indian policy analyst Sanjaya Baru published "*The Accidental Prime Minister*", a memoir, based on his experiences as a media advisor to _____.

- Ans
1. Rahul Gandhi
 2. Indira Gandhi
 3. Narendra Modi

4. Manmohan Singh

Question ID : 9895809454
Chosen Option : 2

Q.2 A recent bank merger that has been announced includes Vijaya Bank, Dena Bank, and _____.

8

- Ans
- 1. Indian Overseas Bank
 - 2. State Bank of India
 - 3. State Bank of Mysore
 - 4. Bank of Baroda

Question ID : 9895809457
Chosen Option : 3

Q.2 Kedarnath Bhattacharya, a popular singer, is better known by the name _____.

9

- Ans
- 1. Kumar Sanu
 - 2. Kishore kumar
 - 3. Bappi Lahiri
 - 4. Arijit Singh

Question ID : 9895809449
Chosen Option : 1

Q.3 The 3 R's to save the environment are:

0

- Ans
- 1. repair, recycle, reuse
 - 2. reduce, recycle, repair
 - 3. reduce, recycle, reuse
 - 4. reduce, repair, reuse

Question ID : 9895809469
Chosen Option : 1

Q.3 The inbuilt variation in reproduction occurs due to sexual reproduction and errors due to:

1

- Ans
- 1. DNA matching
 - 2. DNA dividing
 - 3. DNA multiplying
 - 4. DNA copying

Question ID : 9895809465
Chosen Option : 1

Q.3 What is the objective of the Constitutional Right to Freedom of Religion in India?

2

- Ans
- 1. To sustain the principle of federalism
 - 2. To sustain the principle of frugalism
 - 3. To sustain the principle of capitalism
 - 4. To sustain the principle of secularism

Question ID : 9895809460
Chosen Option : 4

Q.3
3 Right to Freedom is guaranteed in the article _____.

- Ans
- 1. 11
 - 2. 15
 - 3. 19
 - 4. 21

Question ID : 9895809461
Chosen Option : 3

Q.3
4 The cheapest means of transport is:

- Ans
- 1. road
 - 2. waterways
 - 3. railways
 - 4. air

Question ID : 9895809467
Chosen Option : 3

Q.3
5 The Jallianwalla Bagh incident happened in:

- Ans
- 1. Punjab
 - 2. Kashmir
 - 3. Delhi
 - 4. Kerala

Question ID : 9895809472
Chosen Option : 4

Q.3
6 We can compare electric current in a conductor to:

- Ans
- 1. water current in rivers
 - 2. an inter-city train ride
 - 3. people walking in a street
 - 4. a bus ride in a city

Question ID : 9895809466
Chosen Option : 1

Q.3
7 How are Fiscal Policy and the Federal Reserve similar?

- Ans
- 1. They both have a Board of Governors
 - 2. They both use the same tools to fix economic problems
 - 3. They both try to promote economic stability
 - 4. They always must have Congressional approval before passing

Question ID : 9895809458
Chosen Option : 3

Q.3
8 The green plants in a terrestrial ecosystem capture about _____ of the energy of sunlight.

- Ans
- 1. 1%
 - 2. 4%
 - 3. 3%
 - 4. 2%

Question ID : 9895809468
Chosen Option : 2

Q.3
9 The power of Satyagraha emphasized the power of what:

- Ans
- 1. strength
 - 2. truth
 - 3. weakness
 - 4. poverty

Question ID : 9895809471
Chosen Option : 1

Q.4
0 The primary purpose of the RBI monetary policy is to maintain:

- Ans
- 1. exchange rate
 - 2. wealth
 - 3. price stability
 - 4. growth

Question ID : 9895809456
Chosen Option : 3

Q.4
1 _____ was known as a unit of measurement of land before the British rule, in Bengal the British standardised it to about one-third of an acre.

- Ans
- 1. Bigha
 - 2. lick
 - 3. Pace
 - 4. Fathom

Question ID : 9895809470
Chosen Option : 3

Q.4
2 The Sahitya Academy Award in English for 2017 was won by:

- Ans
- 1. Rana Ayub
 - 2. Mamang Dai
 - 3. Chetan Bhagat
 - 4. Shashi Tharoor

Question ID : 9895809453
Chosen Option : 4

Q.4
3 Nettle plants which grow in the wild protect themselves using:

- Ans
- 1. hair
 - 2. smell
 - 3. spray
 - 4. thorns

Question ID : 9895809464
Chosen Option : 2

Q.4
4 A statue of DMK leader _____ was unveiled in Chennai recently.

- Ans
- 1. M Karunanidhi
 - 2. J Jayalalitha
 - 3. MG Ramachandran
 - 4. MK Stalin

Question ID : 9895809455
Chosen Option : 1

Q.4
5 The 2019 Kumbh Mela is held on the site of confluence of the rivers Ganga, Yamuna and _____.

- Ans
- 1. Cauvery
 - 2. Brahmaputra
 - 3. Saraswati
 - 4. Godavari

Question ID : 9895809450
Chosen Option : 3

Q.4
6 Olympic Council of Asia (OCA) has chosen Japanese woman swimmer _____ as winner of Most Valuable Player (MVP) Trophy Award in 2018 Jakarta and Palembang Asian Games.

- Ans
- 1. Rikako Ikee
 - 2. Katsumi Nakamura
 - 3. Ryosuke Ire
 - 4. Zhang Lin

Question ID : 9895809452
Chosen Option : 3

Q.4
7 To test whether something is acidic or alkaline, we can use either a litmus paper or _____.

- Ans
- 1. soda ash
 - 2. sugar
 - 3. salt
 - 4. turmeric

Question ID : 9895809463
Chosen Option : 1

Q.4
8 As per the Constitution, India is also known as:

Ans

- 1. Bharat
- 2. Aryavarta
- 3. Hindustan
- 4. South Asia

Question ID : 9895809459
Chosen Option : 1

Q.4
9 Algae are useful for humankind because they:

- Ans
- 1. help to clean dirty places
 - 2. help to fix the ozone layer
 - 3. help to create more oxygen
 - 4. help to create more carbon dioxide

Question ID : 9895809462
Chosen Option : 3

Q.5
0 Name the new chief coach of the Indian cricket team till ICC World Cup 2019.

- Ans
- 1. Sunil Gavaskar
 - 2. Kapil Dev
 - 3. Ravi Shastri
 - 4. Anil Kumble

Question ID : 9895809451
Chosen Option : 4

Q.5
1 If a sum of ₹ 2000 is lent at 10% p.a. compound interest, what is the interest for the second year?

- Ans
- 1. ₹ 440
 - 2. ₹ 225
 - 3. ₹ 200
 - 4. ₹ 220

Question ID : 9895809637
Chosen Option : 2

Q.5
2 The average of 2 numbers is ab . If one of the number is a , the other is:

- Ans
- 1. $2b - a$
 - 2. $2ab - a$
 - 3. $2a - b$
 - 4. $2ab - b$

Question ID : 9895809626
Chosen Option : 4

Q.5
3 X is twice as good as workman as Y. Together, they finish the work in 18 days. In how many days can it be done by each separately?

- Ans
- 1. X = 27 days, Y = 54 days

2. X = 9 days, Y = 18 days
3. X = 21 days, Y = 42 days
4. X = 19 days, Y = 38 days

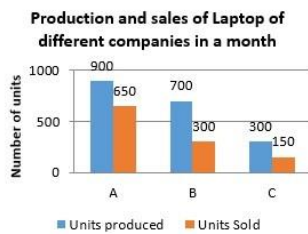
Question ID : 9895809638
Chosen Option : 2

Q.5
4 A, B and C contract a work for ₹ 550 together. A and B are supposed to do $\frac{7}{11}$ of the work. The amount that C gets is:

- Ans
1. ₹ 200
 2. ₹ 210
 3. ₹ 100
 4. ₹ 150

Question ID : 9895809639
Chosen Option : 4

Q.5
5 Study the following graph carefully to answer the questions given below.



Percentage of sale of units with respect to its production is between 40% and 43%, in case of company:

- Ans
1. B
 2. A
 3. C
 - ~~4. B and C both~~

Question ID : 9895809646
Chosen Option : 2

Q.5
6 In a circular garden of radius 15 m, a path of 2 m wide has to be made inside the garden at the rate of ₹ 24 per sq. m.

The cost of making the path is: (Take $\pi = \frac{22}{7}$)

- Ans
- ~~1. ₹ 3864~~
 - ~~2. ₹ 4100~~
 - ✓ 3. ₹ 4224
 - ~~4. ₹ 4355~~

Question ID : 9895809642
Chosen Option : 1

Q.5
7 The mode of a distribution is 24 and the mean is 60. What is its median?

- Ans
- ✓ 1. 48
 - ~~2. 50~~
 - ~~3. 51~~

~~X~~ 4. 45

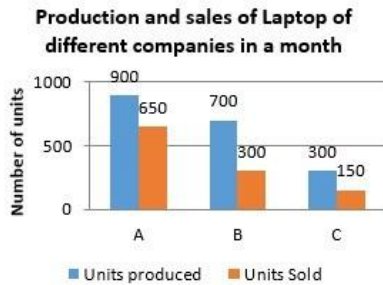
Question ID : 9895809629
Chosen Option : 1

Q.5
8 If 50% of a certain number is equal to $\frac{3}{4}$ th of another number, what is the ratio between the numbers?

- Ans
1. 3 : 2
 2. 2 : 5
 3. 5 : 2
 4. 3 : 4

Question ID : 9895809630
Chosen Option : 2

Q.5
9 Study the following graph carefully to answer the questions given below.



What is the average number of Units of laptop sold by all the Companies together?

- Ans
- ~~X~~ 1. $410\frac{2}{3}$
 2. $391\frac{2}{3}$
 3. $366\frac{2}{3}$
 4. $366\frac{1}{3}$

Question ID : 9895809645
Chosen Option : 4

Q.6
0 ₹ 500 was invested at 12% per annum simple interest and a certain sum of money at 10% per annum simple interest. If the sum of the interests on both the sum after 4 years is ₹ 480, the other sum of money is:

- Ans
1. ₹ 750
 2. ₹ 600
 3. ₹ 550
 4. ₹ 450

Question ID : 9895809636
Chosen Option : 2

Q.6
1 When the price of a cycle is decreased by 20%, then the selling is increased by 20%. What is the impact on the receipt of the revenue?

- Ans
1. 5% profit

2. 4% profit
3. 4% loss
4. No profit no loss

Question ID : 9895809632
Chosen Option : 2

Q.6 Two adjacent sides of a parallelogram are 12 cm and 9 cm and one of the angle is 30° . Find the area of parallelogram.

2

- Ans
1. 96 sq. cm
 2. 108 sq. cm
 3. 54 sq. cm
 4. 27 sq. cm

Question ID : 9895809643
Chosen Option : 3

Q.6 The LCM of 779, 943 and 123 is:

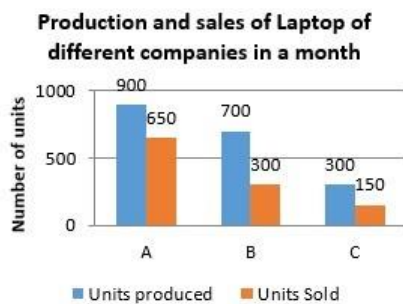
3

- Ans
1. 17917
 2. 53751
 3. 35834
 4. 71668

Question ID : 9895809623
Chosen Option : 3

Q.6 Study the following graph carefully to answer the questions given below.

4



What is the average number of Units produced by all the Companies together?

- Ans
1. $625\frac{1}{3}$
 2. $623\frac{1}{3}$
 3. $633\frac{2}{3}$
 4. $633\frac{1}{3}$

Question ID : 9895809647
Chosen Option : 1

5 If 20% of A = 35% of B, then A : B =

- Ans
1. 5 : 7
 2. 1 : 2
 3. 7 : 4
 4. 2 : 3

Question ID : 9895809633
Chosen Option : 1

Q.6 In a family of 4 adults and some minors, the average consumption of rice per head per month is 8.5 kg, while the average consumption for adults is 10 kg per head and for minor it is 5.5 kg per head. The number of minors in the family is:

- Ans
1. 5
 2. 4
 3. 2
 4. 3

Question ID : 9895809627
Chosen Option : 2

Q.6 The ratio of the present age of Mahesh and Ajay is 3 : 2 respectively. After 8 years. Ratio of their age will be 11 : 8.
7 What will be the present age of Mahesh's son if his age is half of the present age of Ajay?

- Ans
1. 12 years
 2. 18 years
 3. 16 years
 4. 15 years

Question ID : 9895809635
Chosen Option : 1

Q.6 A hollow cylinder with outer radius 4 cm and height 2 cm is made up of 1 cm thick metal sheet. What is the volume of
8 metal used? (Take $\pi = \frac{22}{7}$)

- Ans
1. 56 cm^3
 2. 40 cm^3
 3. 65 cm^3
 4. 44 cm^3

Question ID : 9895809644
Chosen Option : 3

Q.6 A shopkeeper organizes a sale on Friday, offering a discount of 23% on all items. Still, he makes a profit of 10% only.
9 By how much percentage CP was lower than MP?

- Ans
1. 20%
 2. 30%
 3. 10%
 4. 15%

Question ID : 9895809628
Chosen Option : 1

Q.7
0 Train A took 30 minute to cover a distance of 50 km. If the speed of train B is 40% faster than train A, then the ratio of the respective speed of the both train is:

- Ans
1. 5 : 7
 2. 3 : 5
 3. 5 : 3
 4. 7 : 5

Question ID : 9895809641
Chosen Option : 4

Q.7
1 The ratio of time taken by A and B to cover a certain distance is 7 : 9. The ratio of their respective speed will be:

- Ans
- ✓ 1. 9 : 7
 - ✗ 2. 3 : 7
 - ✗ 3. 7 : 3
 - ✗ 4. 7 : 9

Question ID : 9895809640
Chosen Option : 2

Q.7
2 The sides of a triangle are in the ratio 6 : 4 : 3 and its perimeter is 104 cm. The length of the longest side (in cm) is:

- Ans
1. 120
 2. 56
 3. 44
 4. 48

Question ID : 9895809634
Chosen Option : 1

Q.7
3 $\frac{4}{5} \div \frac{4}{5}$ of $\frac{1}{10} \times \frac{1}{20} = ?$

- Ans
- ✓ 1. $\frac{1}{2}$
 2. $\frac{1}{10}$
 3. $\frac{1}{15}$
 4. $\frac{1}{5}$

Question ID : 9895809624
Chosen Option : 1

Q.7
4 A person wants to sell an item at a profit of 20% but he sold it for ₹ 480 at a loss of 20%. At what price should have he sold it to get the required profit?

- Ans
1. ₹ 600
 2. ₹ 720

3. ₹ 840

4. ₹ 750

Question ID : 9895809631
Chosen Option : 3

Q.7 What approximate value should come in place of the question mark (?) in the following equation?
5

$$\left(\frac{1}{9} \div \frac{1}{9} \text{ of } \frac{1}{3}\right) \text{ of } \frac{1}{6} = ?$$

Ans

1. $\frac{1}{3}$
 2. $\frac{1}{6}$
 3. $\frac{1}{9}$
 4. $\frac{1}{2}$

Question ID : 9895809625
Chosen Option : 4

Section : English Language

Q.1 Identify the segment in the sentence which contains the grammatical error from the given options.

Sujata and Kavita were sent to buy groceries for their neighborhood shop.

Ans

1. to buy
 2. were sent
 3. Sujata and Kavita
 4. for their

Question ID : 9895809801
Chosen Option : 2

Q.2 Select the most appropriate word to fill in the blank.

All attempts to _____ our late leader have failed. People still love him and cherish his memory.

Ans

1. defame
 2. demolish
 3. distress
 4. damage

Question ID : 9895809824
Chosen Option : 1

Q.3 Select the antonym of the given word.

EVIDENT

Ans

1. Noticeable
 2. Obscure
 3. Conspicuous

4. Apparent

Question ID : 9895809817
Chosen Option : 4

Q.4 Select the most appropriate word to fill in the blank.

When dams are built, thousands of people _____.

- Ans
1. were displaced
 2. are displaced
 3. is displaced
 4. was displaced

Question ID : 9895809807
Chosen Option : 2

Q.5 Select the meaning of the given idiom.

To beat about the bush

- Ans
1. To avoid coming to the point
 2. To talk too much
 3. To punish an innocent person
 4. To be aggressive

Question ID : 9895809819
Chosen Option : 4

Q.6 Select the wrongly spelt word.

- Ans
1. Glamourous
 2. Grandure
 3. Grievous
 4. Gauge

Question ID : 9895809822
Chosen Option : 1

Q.7 Select the antonym of the given word.

MOURNFUL

- Ans
1. Sorrowful
 2. Joyous
 3. Depressed
 4. Melancholy

Question ID : 9895809816
Chosen Option : 3

Q.8

Select the synonym of the given word.

ATTAIN

- Ans
- 1. Prosper
 - 2. Lose
 - 3. Achieve
 - 4. Abandon

Question ID : 9895809815
Chosen Option : 3

Q.9 Select the meaning of the given idiom.

To take heart

- Ans
- 1. To gain confidence
 - 2. To love everyone
 - 3. To take matter seriously
 - 4. To be emotional

Question ID : 9895809818
Chosen Option : 2

Q.1
0 Select the wrongly spelt word.

- Ans
- 1. Grateful
 - 2. Government
 - 3. Grandeur
 - 4. Guarantee

Question ID : 9895809823
Chosen Option : 1

Q.1
1 Select the word which means the same as the group of words given.

A person of unconventional and slightly strange views or behaviour

- Ans
- 1. Traditional
 - 2. Conventional
 - 3. Eccentric
 - 4. Wholesome

Question ID : 9895809820
Chosen Option : 2

Q.1
2 Select the most appropriate word to fill in the blank.

By her _____ manner, she made herself liked by everyone who met her.

- Ans
- 1. curious
 - 2. sublime
 - 3. winsome
 - 4. victorious

Question ID : 9895809825
Chosen Option : 4

Q.1 Select the most appropriate option to substitute the underlined segment in the given sentence. If there is no need to substitute it, select No substitution required.

3

Very often, the small farmers needed to borrowed money to meet high expenses.

Ans

- 1. need to borrow
- 2. needing to borrow
- 3. No substitution required
- 4. needs to borrow

Question ID : 9895809804
Chosen Option : 4

Q.1 Select the most appropriate option to substitute the underlined segment in the given sentence. If there is no need to substitute it, select No substitution required.

4

People in urban areas could have enter markets without stepping out of their homes via the Internet.

Ans

- 1. could entered markets
- 2. can enter markets
- 3. can entered markets
- 4. No substitution required

Question ID : 9895809803
Chosen Option : 2

Q.1 Select the most appropriate option to substitute the underlined segment in the given sentence. If there is no need to substitute it, select No substitution required.

5

The merchant distributes work among the weavers based on the orders received.

Ans

- 1. among all of the weavers
- 2. among weaver
- 3. between weaver
- 4. No substitution required

Question ID : 9895809805
Chosen Option : 3

Comprehension:

In the following passage some words have been deleted. Fill in the blanks with the help of the alternatives given. Select the most appropriate option for each number.

A dam is built across a river at sites where one can (1) _____ a lot of water. This forms (2) _____ reservoir and as the water collects, it (3) _____ vast areas of land. This is (4) _____ the wall of the dam across the river is high and the (5) _____ spreads over a large area.

SubQuestion No : 16

Q.1 Select the most appropriate option that will fill in the blank number 1

6

Ans

- 1. assemble
- 2. dispose
- 3. collect
- 4. flow

Question ID : 9895809809
Chosen Option : 3

Comprehension:

In the following passage some words have been deleted. Fill in the blanks with the help of the alternatives given. Select the most appropriate option for each number.

A dam is built across a river at sites where one can (1) _____ a lot of water. This forms (2) _____ reservoir and as the water collects, it (3) _____ vast areas of land. This is (4) _____ the wall of the dam across the river is high and the (5) _____ spreads over a large area.

SubQuestion No : 17

Q.1
7 Select the most appropriate option that will fill in the blank
number 2

- Ans
- 1. one
 - 2. the
 - 3. an
 - 4. a

Question ID : 9895809810
Chosen Option : 3

Comprehension:

In the following passage some words have been deleted. Fill in the blanks with the help of the alternatives given. Select the most appropriate option for each number.

A dam is built across a river at sites where one can (1) _____ a lot of water. This forms (2) _____ reservoir and as the water collects, it (3) _____ vast areas of land. This is (4) _____ the wall of the dam across the river is high and the (5) _____ spreads over a large area.

SubQuestion No : 18

Q.1
8 Select the most appropriate option that will fill in the blank
number 3

- Ans
- 1. ruins
 - 2. submerges
 - 3. separates
 - 4. divides

Question ID : 9895809811
Chosen Option : 1

Comprehension:

In the following passage some words have been deleted. Fill in the blanks with the help of the alternatives given. Select the most appropriate option for each number.

A dam is built across a river at sites where one can (1) _____ a lot of water. This forms (2) _____ reservoir and as the water collects, it (3) _____ vast areas of land. This is (4) _____ the wall of the dam across the river is high and the (5) _____ spreads over a large area.

SubQuestion No : 19

Q.1
9 Select the most appropriate option that will fill in the blank number 4

- Ans
- 1. though
 - 2. because
 - 3. yet
 - 4. so

Question ID : 9895809812
Chosen Option : 1

Comprehension:

In the following passage some words have been deleted. Fill in the blanks with the help of the alternatives given. Select the most appropriate option for each number.

A dam is built across a river at sites where one can (1) _____ a lot of water. This forms (2) _____ reservoir and as the water collects, it (3) _____ vast areas of land. This is (4) _____ the wall of the dam across the river is high and the (5) _____ spreads over a large area.

SubQuestion No : 20

Q.2
0 Select the most appropriate option that will fill in the blank number 5

- Ans
- 1. water
 - 2. land
 - 3. river
 - 4. dam

Question ID : 9895809813
Chosen Option : 1

Q.2
1 Select the synonym of the given word.

ANNOY

- Ans
- 1. Gratify
 - 2. Irritate
 - 3. Satisfy
 - 4. Please

Question ID : 9895809814

Q.2 Identify the segment in the sentence which contains the grammatical error from the given options.

2

One of the advantages of weekly markets is that much things are available at one place.

Ans

1. one place
2. much things
3. weekly markets
4. One of the

Question ID : 9895809800

Chosen Option : 3

Q.2 Identify the segment in the sentence which contains the grammatical error from the given options.

3

In clinics, you may have noticed sales representatives waiting with doctors.

Ans

1. In clinics
2. may have noticed
3. waiting with
4. sales representatives

Question ID : 9895809802

Chosen Option : 2

Q.2 Select the most appropriate word to fill in the blank.

4

The wages of daily workers are fixed according _____ their skills.

Ans

1. from
2. to
3. of
4. with

Question ID : 9895809806

Chosen Option : 1

Q.2 Select the word which means the same as the group of words given.

5

A solution or remedy for all difficulties or diseases.

Ans

1. Ailment
2. Riddle
3. Panacea
4. Dilemma

Question ID : 9895809821

Chosen Option : 2

Section : Hindi Language

Q.1 दिए गए वाक्य में रेखांकित खंड को प्रतिस्थापित करने के लिए उपयुक्त विकल्प का चयन करें।

राम और श्याम दोनों साथ काम करने वाले हैं।

Ans

- 1. दूरदर्शी
- 2. सहकर्मी
- 3. सहपाठी
- 4. दुराचारी

Question ID : 9895809934
Chosen Option : --

Q.2 रिक्त स्थान को भरने के लिए उपयुक्त शब्द का चयन करें।
जो अपराध करता है, वह _____ है।

Ans

- 1. बुद्धिमान
- 2. समझदार
- 3. दण्डनीय
- 4. होशियार

Question ID : 9895809937
Chosen Option : --

Q.3 रिक्त स्थान को भरने के लिए उपयुक्त शब्द का चयन करें।
उसने परीक्षा दी, किंतु उसे _____ नहीं मिली।

Ans

- 1. योग्यता
- 2. तारीख
- 3. सफलता
- 4. प्रतिभा

Question ID : 9895809939
Chosen Option : --

Q.4 'विधि' शब्द का विलोम शब्द है-

Ans

- 1. निषेध
- 2. नकारात्मक
- 3. दंड
- 4. निधि

Question ID : 9895809946
Chosen Option : --

Q.5 'सम्पत्ति' शब्द का विलोम शब्द है-

Ans

- 1. समस्या
- 2. धन
- 3. विपत्ति
- 4. कष्ट

Question ID : 9895809947
Chosen Option : --

Q.6 'कल पड़ना' मुहावरे का अर्थ है-

- Ans 1. पश्चाताप करना
2. अस्थिर होना
3. चैन मिलना
4. चुप रहना

Question ID : 9895809951
Chosen Option : --

Q.7 दिए गए वाक्य का वह भाग ज्ञात करें जिसमें कोई त्रुटि है।

मानव जीवन की सार्थकता परहित के लिए बलिदान करने का भावना में निहित है।

- Ans 1. परहित के लिए
2. मानव जीवन की सार्थकता
3. में निहित है।
4. बलिदान करने का भावना

Question ID : 9895809932
Chosen Option : --

Q.8 दिए गए वाक्य का वह भाग ज्ञात करें जिसमें कोई त्रुटि है।

गाँधी जी वकालत छोड़कर देश के स्वतंत्रता संग्राम पर कूद पड़े।

- Ans 1. गाँधी जी
2. वकालत छोड़कर
3. स्वतंत्रता संग्राम पर कूद पड़े।
4. देश के

Question ID : 9895809931
Chosen Option : --

Q.9 सही वर्तनी वाले शब्द का चयन करें।

- Ans 1. अवश्यकता
 2. आवस्यकता
 3. आवश्यकता
 4. अवस्यकता

Question ID : 9895809955
Chosen Option : --

Q.1 0 सही वर्तनी वाले शब्द का चयन करें।

Ans

✗ 1. ओदार्य

2. औदारिता

3. औदार

4. औदार्य

Question ID : 9895809954

Chosen Option : --

Q.1 ₁ दिए गए वाक्य में रेखांकित खंड को प्रतिस्थापित करने के लिए उपयुक्त विकल्प का चयन करें।

हमारे विद्यालय में वर्ष में एक बार होने वाले समारोह की तैयारियाँ हो रही हैं।

Ans

1. त्रिमासिक

2. वार्षिक

3. त्रयोदशी

4. अर्द्धवार्षिक

Question ID : 9895809935

Chosen Option : --

Q.1 ₂ दिए गए वाक्य का वह भाग ज्ञात करें जिसमें कोई त्रुटि है।

घटना के समय वह सोने में जाने वाली थी किन्तु न जा सकी।

Ans

✗ 1. किन्तु न जा सकी।

2. घटना के समय

3. जाने वाली थी

4. वह सोने में

Question ID : 9895809930

Chosen Option : --

Q.1 ₃ 'दूर की सोचने वाला' के लिए एक शब्द प्रयुक्त होता है-

Ans

1. ज्योतिषी

2. समदर्शी

3. भविष्यवक्ता

4. दूरदर्शी

Question ID : 9895809952

Chosen Option : --

Q.1 ₄ 'गंगा' का पर्यायवाची शब्द है-

Ans

1. मंदाकिनी

2. नदी

3. कालिन्दी
4. सरिता

Question ID : 9895809948
Chosen Option : --

Q.1
5 रिक्त स्थान को भरने के लिए उपयुक्त शब्द का चयन करें।

जंगल में _____ अंधकार था।

- Ans 1. महान
 2. घना
3. अधिक
4. विशाल

Question ID : 9895809936
Chosen Option : --

Comprehension:

निम्नलिखित गद्यांश के रिक्त स्थानों की पूर्ति गद्यांश के नीचे दिए गए प्रश्नों के अनुसार कीजिए -

एक बार ऐसा हुआ कि गुजरात देश में बड़ा _____ (1) अकाल पड़ा। उन दिनों गुजरात में कवि भारवि रहते थे। उन्होंने सोचा इस अकाल में चलकर राजा भोज की ही _____ (2) लें, वह विद्वानों का _____ (3) करता है और धन भी देता है। कवि की स्त्री को यह बात _____ (4) आई और दोनों स्त्री-पुरुष राजा भोज के _____ (5) में जाने के लिए निकल पड़े।

SubQuestion No : 16

Q.1
6 गद्यांश में संकेतित रिक्त स्थान (1) के लिए उपयुक्त शब्द होगा-

- Ans 1. भारी
2. अनिश्चित
 3. हलका
4. निश्चित

Question ID : 9895809941
Chosen Option : --

Comprehension:

निम्नलिखित गद्यांश के रिक्त स्थानों की पूर्ति गद्यांश के नीचे दिए गए प्रश्नों के अनुसार कीजिए -

एक बार ऐसा हुआ कि गुजरात देश में बड़ा _____ (1) अकाल पड़ा। उन दिनों गुजरात में कवि भारवि रहते थे। उन्होंने सोचा इस अकाल में चलकर राजा भोज की ही _____ (2) लें, वह विद्वानों का _____ (3) करता है और धन भी देता है। कवि की स्त्री को यह बात _____ (4) आई और दोनों स्त्री-पुरुष राजा भोज के _____ (5) में जाने के लिए निकल पड़े।

SubQuestion No : 17

Q.1
7 गद्यांश में संकेतित रिक्त स्थान (2) के लिए उपयुक्त शब्द होगा-

- Ans
- 1. खबर
 - 2. समाचार
 - 3. सूचना
 - 4. शरण

Question ID : 9895809942
Chosen Option : --

Comprehension:

निम्नलिखित गद्यांश के रिक्त स्थानों की पूर्ति गद्यांश के नीचे दिए गए प्रश्नों के अनुसार कीजिए -

एक बार ऐसा हुआ कि गुजरात देश में बड़ा _____ (1) अकाल पड़ा। उन दिनों गुजरात में कवि भारवि रहते थे। उन्होंने सोचा इस अकाल में चलकर राजा भोज की ही _____ (2) लें, वह विद्वानों का _____ (3) करता है और धन भी देता है। कवि की स्त्री को यह बात _____ (4) आई और दोनों स्त्री-पुरुष राजा भोज के _____ (5) में जाने के लिए निकल पड़े।

SubQuestion No : 18

Q.1
8 गद्यांश में संकेतित रिक्त स्थान (3) के लिए
उपयुक्त शब्द होगा-

- Ans
1. तिरस्कार
 2. आदर
 3. निरादर
 4. अपमान

Question ID : 9895809943
Chosen Option : --

Comprehension:

निम्नलिखित गद्यांश के रिक्त स्थानों की
पूर्ति गद्यांश के नीचे दिए गए प्रश्नों के
अनुसार कीजिए -

एक बार ऐसा हुआ कि गुजरात देश में बड़ा
_____ (1) अकाल पड़ा। उन दिनों
गुजरात में कवि भारवि रहते थे। उन्होंने
सोचा इस अकाल में चलकर राजा भोज की
ही _____ (2) लें, वह विद्वानों का
_____ (3) करता है और धन भी देता
है। कवि की स्त्री को यह बात _____
(4) आई और दोनों स्त्री-पुरुष राजा भोज के
_____ (5) में जाने के लिए निकल पड़े।

SubQuestion No : 19

Q.1
9 गद्यांश में संकेतित रिक्त स्थान (4) के लिए
उपयुक्त शब्द होगा-

- Ans
1. नापसंद
 2. रोचक
 3. पसन्द
 4. अपसंद

Question ID : 9895809944
Chosen Option : --

Comprehension:

निम्नलिखित गद्यांश के रिक्त स्थानों की पूर्ति गद्यांश के नीचे दिए गए प्रश्नों के अनुसार कीजिए -

एक बार ऐसा हुआ कि गुजरात देश में बड़ा _____ (1) अकाल पड़ा। उन दिनों गुजरात में कवि भारवि रहते थे। उन्होंने सोचा इस अकाल में चलकर राजा भोज की ही _____ (2) लें, वह विद्वानों का _____ (3) करता है और धन भी देता है। कवि की स्त्री को यह बात _____ (4) आई और दोनों स्त्री-पुरुष राजा भोज के _____ (5) में जाने के लिए निकल पड़े।

SubQuestion No : 20

Q.2
0 गद्यांश में संकेतित रिक्त स्थान (5) के लिए उपयुक्त शब्द होगा-

- Ans 1. घाट
 2. घरबार
 3. दरबार
 4. गांव

Question ID : 9895809945
Chosen Option : --

Q.2
1 रिक्त स्थान को भरने के लिए उपयुक्त शब्द का चयन करें।

आचरण की सभ्यतामयी भाषा सदा _____ रहती है।

- Ans 1. कटु
 2. प्रखर
 3. मौन
 4. मुखर

Question ID : 9895809938
Chosen Option : --

Q.2
2 'जिसे छोड़ा न जा सके' के लिए एक शब्द प्रयुक्त होता है-

- Ans 1. असाधारण
 2. अपरिहार्य
 3. कठिन
 4. असामान्य

Question ID : 9895809953
Chosen Option : --

Q.2
3 'आँखे फेर लेना' मुहावरे का अर्थ है-

Ans

1. गुस्सा होना
 2. प्रतिकूल होना
 3. क्रोधित होना
 4. धोखा देना

Question ID : 9895809950
Chosen Option : --

Q.2
4 दिए गए वाक्य में रेखांकित खंड को प्रतिस्थापित करने के लिए उपयुक्त विकल्प का चयन करें।

आगरा का ताजमहल ऐतिहासिक है, जो देखने योग्य है।

Ans

1. सर्वप्रिय
 2. दर्शनीय
 3. ऐतिहासिक
 4. दिखावटी

Question ID : 9895809933
Chosen Option : --

Q.2
5 'सखा' का पर्यायवाची शब्द है-

Ans

1. अखंड
 2. हमसफर
 3. मित्र
 4. राहगीर

Question ID : 9895809949
Chosen Option : --

Constable (GD) in CAPFs, NIA, SSF and Rifleman (GD) in Assam Rifles Examination, 2018

Roll No. :	
Registration No.	
Name :	
Exam Venue :	Assam Online Guwahati
Exam Time :	4:00 PM - 5:30 PM
Exam Date :	09/03/2019

Section : General Section

Q.1 Select the correct option that will fill in the blank and complete the series.

R, U, X, A, _____

- Ans 1. D
 2. F
 3. T
 4. C

Question ID : 9895809298

Chosen Option : 2

Q.2

The statements below are followed by two conclusions labeled I and II. Assuming that the information in the statements is true, even if it appears to be at variance with generally established facts, decide which conclusion(s) logically and definitely follow(s) from the information given in the statements.

Statements:

All bangles are rings.

Some rings are toys.

Some toys are dolls.

Conclusions:

I. Some rings are bangles.

II. Some dolls are toys.

- Ans 1. Either conclusion I or II follows
 2. Neither conclusion I nor II follows
 3. Only conclusion I follows
 4. Only conclusion II follows

Question ID : 9895809310

Chosen Option : 2

Q.3

Select the correct option that will fill in the blank and complete the series.

12, 14, 17, 15, 22, 16, _____

- Ans 1. 18
 2. 27
 3. 17
 4. 30

Question ID : 9895809311
Chosen Option : 1

Q.4 Select the option that is related to the third term in the same way as the second term is related to the first term.

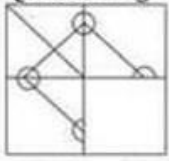
EFR : RFE :: DJT : ?





- Ans 1. TJD
 2. DTJ
 3. TDJ
 4. JTD

Question ID : 9895809303
Chosen Option : 1

Q.5 Which of the following answer figure will complete the given figure?

Question Figure:



- Ans 1. 
 2. 
 3. 
 4. 

Question ID : 9895809318
Chosen Option : 4

Q.6 In a certain code, MISSION is coded as MJSSJPN, then how is LIBRARY coded in the same way?

- Ans 1. LJBRYRB
 2. LBKRBRZ
 3. LKBRBRZ
 4. LJBRBRY

Question ID : 9895809304
Chosen Option : 2

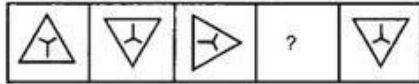
Q.7 If GLOBALLY is written as 61374118 and CITY as 2958, how will BOAT be written?

- Ans 1. 7365
 2. 7345
 3. 7354
 4. 7321

Question ID : 9895809305

Q.8 Choose the option which completes the given figure series

PROBLEM FIGURES



Ans

- ✓ 1.
- ✗ 2.
- ✗ 3.
- ✗ 4.

Question ID : 9895809317
Chosen Option : 1

Q.9 Select the related word pair from the given alternatives.

Roger Federer : Tennis :: _____ : _____

Ans

- ✓ 1. Pullela Gopichand : badminton
- ✗ 2. Prakash Padukone : Tennis
- ✗ 3. Ricky Ponting : Football
- ✗ 4. Cristiano Ronaldo : Cricket

Question ID : 9895809302
Chosen Option : 4

Q.1 Select the option that is related to the Third term in the same way as the second term is related to the first term.

0
20 : 25 :: 8 : ?

Ans

- ✗ 1. 6
- ✓ 2. 10
- ✗ 3. 7
- ✗ 4. 9

Question ID : 9895809313
Chosen Option : 1

Q.1
1 Mona, Kanak, John, Honey, Isha and Lara are watching a movie in a theater which has screen in the north. They are sitting in certain way.

- (i) Only Kanak is sitting between Honey and John.
- (ii) Lara is to the right of Mona who is sitting at extreme left.
- (iii) Isha is to the immediate right of John.

Who is sitting between Kanak and Lara?

Ans

1. Honey

2. John
3. Isha
4. Mona

Question ID : 9895809306
Chosen Option : 3

Q.1
2 Choose the option figure in which the problem figure is hidden/embedded.

Problem Figure:

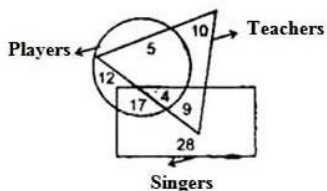


Ans

- 1.
- 2.
- 3.
- 4.

Question ID : 9895809319
Chosen Option : 4

Q.1
3 In the given Venn diagram which number shows players who are neither Teachers nor Singers?



- Ans
1. 5
 2. 17
 3. 4
 4. 12

Question ID : 9895809322
Chosen Option : 4

Q.1
4 Find the missing number from the below options.

64	125	216	343
216	405	512	?

- Ans 1. 1071

2. 1324

3. 1096

4. 1051

Question ID : 9895809315
Chosen Option : 4

Q.1
5 If 'L' means ' \times ', 'N' means '+', 'O' means ' \div ', and 'M' means '-', then:

1000 O 5 N 66 M 33 = ?

Ans 1. 433

2. 333

3. 483

4. 233

Question ID : 9895809316
Chosen Option : 1

Q.1
6 Four options have been given out of which three are alike in some manner, while one is different. Choose the odd one.

Ans 1. 16-81

2. 49-64

3. 4-9

4. 25-36

Question ID : 9895809314
Chosen Option : 2

Q.1
7 A piece of paper is folded in the manner shown in the question figure(s). Select the figure out of the answer choices showing the unfolded pattern after the punches (cut).

Question Figure:



Ans

1.

2.

3.

4.

Question ID : 9895809321
Chosen Option : 1

Q.1
8 Select the related word pair from the given alternatives.

Book : Pages :: _____ : _____

Ans 1. Hand : Finger

2. Neck : Collar

3. Tie : Shirt

4. Socks : Feet

Question ID : 9895809301

Chosen Option : 2

Q.1 Four letter clusters have been given, out of which three are alike in some manner, while one is different. Choose the odd one.

Ans 1. EAfg

2. eaWT

3. AUrs

4. vwOA

Question ID : 9895809299

Chosen Option : 1

Q.2 Some children are sitting in a row facing north. Among those, Sameer is 17th from the left and second to the right of Jay, who is 15th from the right of the row, then how many children are there in the row?

Ans 1. 31

2. 29

3. 24

4. 30

Question ID : 9895809308

Chosen Option : 3

Q.2 Four words have been given, out of which three are alike in some manner, while one is different. Choose the odd one.

Ans 1. Parents

2. Siblings

3. Guardian

4. Ancestor

Question ID : 9895809300

Chosen Option : 1

Q.2 The statements below are followed by two conclusions labeled I and II. Assuming that the information in the statements is true, even if it appears to be at variance with generally established facts, decide which conclusion(s) logically and definitely follow(s) from the information given in the statements.

Statements:

1. Some players are singers.

2. All singers are tall.

3. Some players are strong.

Conclusions:

I. Some players are tall.

II. All players are strong.

Ans 1. Neither conclusion I nor II follows

2. Only conclusion I follows

3. Only conclusion II follows

4. Either conclusion I or II follows

Question ID : 9895809309
Chosen Option : 2

Q.2
3 Select the correct option that will fill in the blank and complete the series.

8, 13, 21, 38, 62, 99, _____

- Ans
- 1. 126
 - 2. 136
 - 3. 147
 - 4. 116

Question ID : 9895809312
Chosen Option : 2

Q.2
4 A, B, C, D, E, F and G are sitting around a circle facing at the centre. D is third to the left of A who is second to the left of F. E is not a neighbour of either F or D. C is third to left of B.

Who is sitting between G and B?

- Ans
- 1. D only
 - 2. F only
 - 3. Both F and D
 - 4. Data inadequate

Question ID : 9895809307
Chosen Option : 2

Q.2
5 If a mirror is placed on the line AB, then which of the answer figures is the right image of the given figure?

Question Figure:



- Ans
- 1.
 - 2.
 - 3.
 - 4.

Question ID : 9895809320
Chosen Option : 4

Q.2
6 Sikkim was associated with the Union of India by the _____ amendment in 1975.

- Ans
- 1. 36th
 - 2. 1st
 - 3. 24th
 - 4. 12th

Question ID : 9895809485
Chosen Option : 4

Q.2
7 Muga silk is the product of the silkworm, endemic to which state?

- Ans
- 1. Tamil Nadu
 - 2. Rajasthan
 - 3. Uttar Pradesh
 - 4. Assam

Question ID : 9895809473
Chosen Option : 3

Q.2
8 Who is the first Indian female amputee to climb Mt. Everest?

- Ans
- 1. Malavath Poorna
 - 2. Arati Saha
 - 3. Arunima Sinha
 - 4. Santosh Yadav

Question ID : 9895809479
Chosen Option : 2

Q.2
9 The place where Dandi Salt March happened lies in the present-day state of:

- Ans
- 1. Delhi
 - 2. Gujarat
 - 3. Kashmir
 - 4. Kerala

Question ID : 9895809497
Chosen Option : 2

Q.3
0 Colonial rulers struggled with educating the people in the colonies because:

- Ans
- 1. too much education could lead to higher obedience
 - 2. too much education could lead to revolt
 - 3. too little education could lead to higher disobedience
 - 4. too little education could lead to revolt

Question ID : 9895809495
Chosen Option : 3

Q.3
1 Who founded the Holkar dynasty, one of the regional Maratha dynasties?

- Ans
- 1. Malhar Rao
 - 2. Raghuji
 - 3. Ramoji
 - 4. Damaji I

Question ID : 9895809496
Chosen Option : 3

Q.3
2 As part of the fundamental rights, the Constitution of India guarantees the right to:

- Ans
- 1.

- 2. travel
- 3. equality
- 4. marriage

Question ID : 9895809486
Chosen Option : 4

Q.3
3 Terylene is a type of:

- Ans
- 1. Polyester
 - 2. Acrylic
 - 3. Rayon
 - 4. Nylon

Question ID : 9895809489
Chosen Option : 1

Q.3
4 Gregor Johann Mendel came up with the theory of inheritance by studying:

- Ans
- 1. animals
 - 2. people
 - 3. peas
 - 4. carrots

Question ID : 9895809490
Chosen Option : 1

Q.3
5 The Ganges is approximately _____ km long.

- Ans
- 1. 5000
 - 2. 2500
 - 3. 1000
 - 4. 2000

Question ID : 9895809494
Chosen Option : 2

Q.3
6 In general, resistivity of an alloy _____ its constituent metals.

- Ans
- 1. has no correlation to
 - 2. is higher than
 - 3. is lower than
 - 4. is same as

Question ID : 9895809491
Chosen Option : 2

Q.3
7 People expect democracies to:

- Ans
- 1. have differential weight in electing representatives
 - 2. increase inequality

3. result in a poorer country
4. have equal weight in electing representatives

Question ID : 9895809484
Chosen Option : 3

Q.3
8 The Chand Minar is located in:

- Ans
1. Maharashtra
 2. Madhya Pradesh
 3. Uttar Pradesh
 4. Kerala

Question ID : 9895809475
Chosen Option : 3

Q.3
9 Limestone, chalk and marble are different forms of:

- Ans
1. calcium carbonate
 2. soda ash
 3. sodium chloride
 4. sugar

Question ID : 9895809488
Chosen Option : 2

Q.4
0 The festival 'Me-Dam-Me-Phi' is celebrated by Tai-Ahom communities of which state?

- Ans
1. Tripura
 2. Mizoram
 3. Manipur
 4. Assam

Question ID : 9895809474
Chosen Option : 4

Q.4
1 Who was the first Indian lady scientist who worked with organic chemistry and medicinal plant?

- Ans
1. Asima Chatterjee
 2. Arati Saha
 3. Aruna Asaf Ali
 4. Anusuya Sarabhai

Question ID : 9895809480
Chosen Option : 1

Q.4
2 Buxa Tiger Reserve is located in:

- Ans
1. Uttar Pradesh
 2. Kerala
 3. West Bengal
 4. Andhra Pradesh

Question ID : 9895809493
Chosen Option : 4

Q.4
3 The Sahitya Academy award in Hindi for 2017 was won by:

- Ans
1. Rana Ayub
 2. Ramesh Shah
 3. Nasira Sharma
 4. Ramesh Megh

Question ID : 9895809478
Chosen Option : 4

Q.4
4 _____ won the 2018 Football World Cup.

- Ans
1. Germany
 2. Brazil
 3. France
 4. Croatia

Question ID : 9895809476
Chosen Option : 3

Q.4
5 In the 2018 Wimbledon, _____ was the winner in the women's finals.

- Ans
1. Martina Hingis
 2. Venus Williams
 3. Serena Williams
 4. Angelique Kerber

Question ID : 9895809477
Chosen Option : 2

Q.4
6 India's GDP growth in 2017 was:

- Ans
1. 4.5%
 2. 6.6%
 3. 11.1%
 4. 8.8%

Question ID : 9895809481
Chosen Option : 2

Q.4
7 Red algae are generally found in:

- Ans
1. mountains
 2. cities
 3. water bodies
 4. deserts

Question ID : 9895809487
Chosen Option : 1

Q.4 In Economic terms, Globalization is the process of rapid _____ between countries.

- Ans
1. Integration
 2. Competition
 - ✗ 3. Investment
 - ✗ 4. Change

Question ID : 9895809483
Chosen Option : 3

Q.4 Belief in the primary importance of the self, the virtues of self-reliance and personal independence is referred to as _____ in Economics.

- Ans
- ✗ 1. Federalism
 2. Frugalism
 3. Capitalism
 - ✓ 4. Individualism

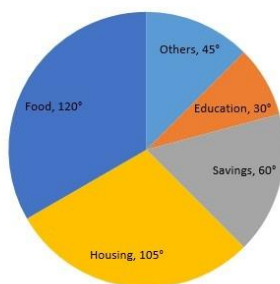
Question ID : 9895809482
Chosen Option : 1

Q.5 In India, district roads are maintained by:

- Ans
1. Zilla parishad
 - ✗ 2. state government
 3. central government
 4. panchayat

Question ID : 9895809492
Chosen Option : 2

Q.5 Study the chart and answer the question based on the pie chart.
1 The pie chart given below shows expenditures incurred by a family on various items and savings in a month. Savings of the family is ₹ 8,000 in a month.



What is the total expenditure of the family for the month?

- Ans
1. ₹ 45,000
 2. ₹ 48,000
 3. ₹ 50,000
 4. ₹ 40,000

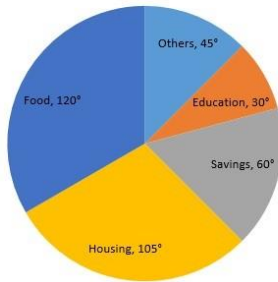
Question ID : 9895809671
Chosen Option : 4

Q.5 Nitin's money becomes double in 4 years at compound interest. In how many years will it become sixteen times at compound interest?

- Ans**
- 1. 20
 - 2. 24
 - 3. 16
 - 4. 28

Question ID : 9895809662
Chosen Option : 3

Q.5 Study the chart and answer the question based on the pie chart.
3 The pie chart given below shows expenditures incurred by a family on various items and savings in a month. Savings of the family is ₹ 8,000 in a month.



How much more amount is spent on food than on housing?

- Ans**
- 1. ₹ 2,000
 - 2. ₹ 3,000
 - 3. ₹ 1,000
 - 4. ₹ 2,500

Question ID : 9895809672
Chosen Option : 2

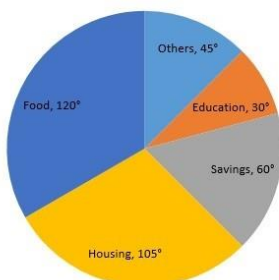
Q.5 What approximate value should come in place of the question mark (?) in the following questions?

4
 $21 + 68 + 17 = ?$

- Ans**
- 1. 25
 - 2. 35
 - 3. 40
 - 4. 10

Question ID : 9895809650
Chosen Option : 2

Q.5 Study the chart and answer the question based on the pie chart.
5 The pie chart given below shows expenditures incurred by a family on various items and savings in a month. Savings of the family is ₹ 8,000 in a month.



The ratio of the expenditure on food to the savings is:

Ans 1. 2 : 1

2. 3 : 4

3. 3 : 2

4. 4 : 3

Question ID : 9895809670
Chosen Option : 3

Q.5
6 If 10 persons can do a job in 20 days. Then 20 persons with the twice efficiency can do the same job in:

Ans 1. 15

2. 10

3. 5

4. 20

Question ID : 9895809664
Chosen Option : 1

Q.5
7 25% of a number is 300. The number is:

Ans 1. 1000

2. 800

3. 1200

4. 900

Question ID : 9895809655
Chosen Option : 3

Q.5
8 The average of numbers 2, 4, 6,....., 100 is:

Ans 1. 51

2. 50

3. 49.5

4. 50.5

Question ID : 9895809651
Chosen Option : 3

Q.5
9 If $A : B = 2 : 3$, $B : C = 3 : 4$ and $C : D = 3 : 5$ then value of $A : B : C : D$ is:

Ans 1. 6 : 9 : 15 : 20

2. 2 : 3 : 4 : 5

3. 2 : 3 : 5 : 12

4. 6 : 9 : 12 : 20

Question ID : 9895809658
Chosen Option : 2

Q.6
0 The average of 20, 25, 35, 15, a, 30 is 22.5. The value of a is:

- Ans
1. 13
 2. 12.5
 3. 10
 4. 15

Question ID : 9895809652
Chosen Option : 2

Q.6
1 The marked price of an item for sale is ₹ 240. If two successive discount of 10% and 5% are given on the marked price, then the selling price of the item (in ₹) will be:

- Ans
1. ₹ 34.80
 2. ₹ 205.20
 3. ₹ 36
 4. ₹ 204

Question ID : 9895809653
Chosen Option : 1

Q.6
2 Two trains 85 m and 155 m long, run at the speeds of 62 km/h and 82 km/h respectively, in opposite directions on parallel tracks. The time which they take to cross each other is:

- Ans
1. 4 seconds
 2. 5 seconds
 3. 6 seconds
 4. 8 seconds

Question ID : 9895809666
Chosen Option : 4

Q.6
3 The length, breadth and height of a room are in the ratio of 4 : 3 : 2. The cost of carpeting the floor at ₹ 10 per square meter is ₹ 480. The height of the room is:

- Ans
1. 10 m
 2. 2 m
 3. 6 m
 4. 4 m

Question ID : 9895809667
Chosen Option : 2

Q.6
4 $11^2 + 11^4 \div 11^3$ of $11 - 11 = ?$

- Ans
1. 111
 2. 121
 3. 131
 4. 101

Question ID : 9895809649
Chosen Option : 1

Q.6
5 The speed of the 'Train 18' is 180 km/hr. The distance covered by it in 10 seconds is:

- Ans
- 1. 100 metres
 - 2. 500 metres
 - 3. 700 metres
 - 4. 648 metres

Question ID : 9895809665
Chosen Option : 1

Q.6
6 A copper wire is bent in the form of an equilateral triangle of area $4\sqrt{3}$ cm². If the same wire is bent into the form of a square, the area of the square will be:

- Ans
- 1. 16 sq. cm
 - 2. 9 sq. cm
 - 3. 144 sq. cm
 - 4. 64 sq. cm

Question ID : 9895809668
Chosen Option : 4

Q.6
7 The total area of a circle and a square is equal to 2611 sq. cm. The diameter of the circle is 42 cm. What is the sum of the circumference of the circle and the perimeter of the square? (Take $\pi = \frac{22}{7}$)

- Ans
- 1. 280 cm
 - 2. 272 cm
 - 3. 380 cm
 - 4. Cannot be determined

Question ID : 9895809663
Chosen Option : 3

Q.6
8 The amount of profit earned by selling an object for ₹ 524 is equal to the amount of loss suffered by selling it for ₹ 452. What is the cost price of the object?

- Ans
- 1. ₹ 480
 - 2. ₹ 488
 - 3. ₹ 485
 - 4. ₹ 500

Question ID : 9895809657
Chosen Option : 3

Q.6
9 A circle, with radius 8 cm, which has the area equal to the area of a triangle with base 8 cm. Then the length of the corresponding altitude of triangle is:

- Ans
- 1. 38π cm
 - 2. 16π cm
 - 3. 18π cm
 - 4. 8π cm

Question ID : 9895809669
Chosen Option : 2

Q.7 The simple interest for the second year on a certain sum at a certain rate of interest is ₹ 1000. What the sum of the
0 interest accrued on it for the 6th, 7th and 8th years?

- Ans
- 1. ₹ 3200
 - 2. ₹ 3300
 - 3. ₹ 3000
 - 4. ₹ 3630

Question ID : 9895809661
Chosen Option : 1

Q.7 If the ratio between two numbers are 3 : 4. If the first number and second number are increased by 40 % and 50%
1 respectively. Then the new ratio of the numbers are:

- Ans
- 1. 9 : 10
 - 2. 11 : 10
 - 3. 3 : 4
 - 4. 7 : 10

Question ID : 9895809660
Chosen Option : 3

Q.7 The difference between the Mode and the Median of a data is 25. What is the difference between the Median and the Mean?
2

- Ans
- 1. 10.5
 - 2. 16
 - 3. 12.5
 - 4. 14

Question ID : 9895809654
Chosen Option : 2

Q.7 Which is the least four-digit number which when divided by 5, 6 and 8 leaves remainder 2 in each case?
3

- Ans
- 1. 1032
 - 2. 1062
 - 3. 1042
 - 4. 1082

Question ID : 9895809648
Chosen Option : 2

Q.7 The ratio of spirit and water is 2 : 5. If the volume of solution is increased by 50% by adding spirit only. What is the
4 resultant ratio of spirit and water?

- Ans
- 1. 9 : 10
 - 2. 12 : 15
 - 3. 11 : 10
 - 4. 3 : 4

Question ID : 9895809659
Chosen Option : 1

Q.7 A trader sold an item at a loss of 20%. Had he sold it for ₹ 100 more, he would have gained a profit of 5%. What is the
5 cost price of the item?

- Ans 1. ₹ 250
 2. ₹ 200
 3. ₹ 25
 4. ₹ 400

Question ID : 9895809656
Chosen Option : 1

Section : English Language

Q.1 Select the most appropriate word to fill in the blank.

Stainless steel pans are usually provided _____ copper bottoms.

- Ans 1. from
 2. by
 3. with
 4. under

Question ID : 9895809832
Chosen Option : 3

Q.2 Select the synonym of the given word.

JUSTICE

- Ans 1. Equality
 2. Liberty
 3. Fraternity
 4. Fairness

Question ID : 9895809840
Chosen Option : 2

Q.3 Identify the segment in the sentence which contains the grammatical error from the given options.

The rearing of silkworms for obtained silk is called sericulture.

- Ans 1. for obtained
 2. silk is
 3. called sericulture
 4. The rearing

Question ID : 9895809827
Chosen Option : 3

Comprehension:

In the following passage some words have been deleted. Fill in the blanks with the help of the alternatives given. Select the most appropriate option for each number.

Our stomach contains hydrochloric acid. It (1) _____ us to digest food, but too much acid (2) _____ the stomach causes indigestion. (3) _____ indigestion is painful. To (4) _____ indigestion, we take (5) _____ antacid such as milk of magnesia.

SubQuestion No : 4

Q.4 Select the most appropriate option that will fill in the blank number 1

- Ans 1. benefits
 2. helps
 3. cures
 4. utilizes

Question ID : 9895809835
Chosen Option : 2

Comprehension:

In the following passage some words have been deleted. Fill in the blanks with the help of the alternatives given. Select the most appropriate option for each number.

Our stomach contains hydrochloric acid. It (1) _____ us to digest food, but too much acid (2) _____ the stomach causes indigestion. (3) _____ indigestion is painful. To (4) _____ indigestion, we take (5) _____ antacid such as milk of magnesia.

SubQuestion No : 5

Q.5 Select the most appropriate option that will fill in the blank number 2

- Ans 1. at
 2. in
 3. from
 4. of

Question ID : 9895809836
Chosen Option : 4

Comprehension:

In the following passage some words have been deleted. Fill in the blanks with the help of the alternatives given. Select the most appropriate option for each number.

Our stomach contains hydrochloric acid. It (1) _____ us to digest food, but too much acid (2) _____ the stomach causes indigestion. (3) _____ indigestion is painful. To (4) _____ indigestion, we take (5) _____ antacid such as milk of magnesia.

SubQuestion No : 6

Q.6 Select the most appropriate option that will fill in the blank

number 3

- Ans
- 1. Whenever
 - 2. Finally
 - 3. Always
 - 4. Sometimes

Question ID : 9895809837
Chosen Option : 3

Comprehension:

In the following passage some words have been deleted. Fill in the blanks with the help of the alternatives given. Select the most appropriate option for each number.

Our stomach contains hydrochloric acid. It (1) _____ us to digest food, but too much acid (2) _____ the stomach causes indigestion. (3) _____ indigestion is painful. To (4) _____ indigestion, we take (5) _____ antacid such as milk of magnesia.

SubQuestion No : 7

Q.7 Select the most appropriate option that will fill in the blank

number 4

- Ans
- 1. soften
 - 2. better
 - 3. correct
 - 4. relieve

Question ID : 9895809838
Chosen Option : 4

Comprehension:

In the following passage some words have been deleted. Fill in the blanks with the help of the alternatives given. Select the most appropriate option for each number.

Our stomach contains hydrochloric acid. It (1) _____ us to digest food, but too much acid (2) _____ the stomach causes indigestion. (3) _____ indigestion is painful. To (4) _____ indigestion, we take (5) _____ antacid such as milk of magnesia.

SubQuestion No : 8

Q.8 Select the most appropriate option that will fill in the blank

number 5

- Ans
- 1. one
 - 2. a
 - 3. the
 - 4. an

Q.9 Select the most appropriate word to fill in the blank.

Some regions of our country still remain _____ to the average man.

- Ans
1. explored
 2. accessible
 3. inaccessible
 4. impossible

Q.1
0 Select the wrongly spelt word.

- Ans
1. Possession
 2. Particuler
 3. Permanent
 4. Personal

Q.1
1 Select the word which means the same as the group of words given.

The science of the causes and effects of diseases

- Ans
1. Pathology
 2. Cardiology
 3. Physiology
 4. Zoology

Q.1
2 Select the synonym of the given word.

LETHARGIC

- Ans
1. Industrious
 2. Active
 3. DILIGENT
 4. Lazy

Q.1
3 Select the wrongly spelt word.

- Ans
1. Hindrance
 2. Humorous

- 3. Hypocrisy
- 4. Harrassment

Question ID : 9895809848
Chosen Option : 4

Q.1
4 Select the meaning of the given idiom.

Cast the first stone

- Ans
- 1. To be deeply involved
 - 2. To be the first to find fault
 - 3. To start a fight
 - 4. To praise first of all

Question ID : 9895809844
Chosen Option : 3

Q.1
5 Select the most appropriate option to substitute the underlined segment in the given sentence. If there is no need to substitute it, select No substitution required

A clinical thermometer consists of a long, narrow, uniform glass tube.

- Ans
- 1. No substitution required
 - 2. is containing the
 - 3. composed of
 - 4. consisted in a

Question ID : 9895809830
Chosen Option : 4

Q.1
6 Select the meaning of the given idiom.

Moot point

- Ans
- 1. Controversial issue
 - 2. Common Belief
 - 3. Basic idea
 - 4. Improper thought

Question ID : 9895809845
Chosen Option : 4

Q.1
7 Identify the segment in the sentence which contains the grammatical error from the given options.

In winter, sheeps are kept indoors and fed on leaves, grain and dry fodder.

- Ans
- 1. sheeps are
 - 2. In winter
 - 3. kept indoors
 - 4. fed on

Question ID : 9895809826
Chosen Option : 3

Q.1
8 Select the most appropriate word to fill in the blank.

Rumours spread that he _____ soon order the army to open fire.

- Ans
- 1. would be
 - 2. will be
 - 3. would have
 - 4. would

Question ID : 9895809833
Chosen Option : 3

Q.1
9 Select the most appropriate option to substitute the underlined segment in the given sentence. If there is no need to substitute it, select No substitution required

The people living in the coastal areas experience a interested phenomenon.

- Ans
- 1. No substitution required
 - 2. the interested phenomenon
 - 3. interestingly phenomenon
 - 4. an interesting phenomenon

Question ID : 9895809831
Chosen Option : 4

Q.2
0 Select the antonym of the given word.

ELEGANT

- Ans
- 1. Unmatched
 - 2. Undignified
 - 3. Graceful
 - 4. Refined

Question ID : 9895809843
Chosen Option : 2

Q.2
1 Select the word which means the same as the group of words given.

The study of human societies and cultures and their development

- Ans
- 1. Choreography
 - 2. Calligraphy
 - 3. Physiotherapy
 - 4. Anthropology

Question ID : 9895809846
Chosen Option : 3

Q.2
2 Select the antonym of the given word.

CURSORY

Ans

1. Thorough
2. Temporary
3. Superficial
4. Casual

Question ID : 9895809842
Chosen Option : 2

Q.2 Identify the segment in the sentence which contains the grammatical error from the given options.
3

The larvae, also called caterpillars eat day and night and increase enormous in size.

- Ans 1. enormous in size
2. and increase
 3. also called
 4. eat day and night

Question ID : 9895809828
Chosen Option : 2

Q.2 Select the most appropriate option to substitute the underlined segment in the given sentence. If there is no need to substitute it, select No substitution required.
4

The eggs are warmed to a suitable temperature for the larvae to hatching from eggs.

- Ans 1. to hatch from eggs.
2. hatched from eggs.
 3. No substitution required
 4. hatch from eggs.

Question ID : 9895809829
Chosen Option : 1

Q.2 Select the most appropriate word to fill in the blank.
5

People like to work for organizations that take interest in their personal and _____ growth.

- Ans 1. professional
2. physical
 3. social
 4. financial

Question ID : 9895809851
Chosen Option : 2

Section : Hindi Language

Q.1 सही वर्तनी वाले शब्द का चयन करें।

- Ans 1. उपरियुक्त
2. ऊपर्युक्त
 3. उपरियुक्त

4. उपर्युक्त

Question ID : 9895809981
Chosen Option : --

Comprehension:

निम्नलिखित गद्यांश के रिक्त स्थानों की पूर्ति गद्यांश के नीचे दिए गए प्रश्नों के अनुसार कीजिए-

स्वस्थ शरीर वाला मनुष्य ही इस संसार के सुखों को भोग सकता है तथा _____ (1) बिता सकता है। स्वस्थ शरीर के लिए पौष्टिक भोजन और व्यायाम दोनों ही अति _____ (2) हैं। व्यायाम करते समय सदा कुछ _____ (3) बरतनी चाहिए। पहली सावधानी यह है कि आयु, समय व शरीर की _____ (4) के अनुसार ही व्यायाम करना चाहिए। दूसरी सावधानी यह है कि सही व्यायाम का _____ (5) करना चाहिए।

SubQuestion No : 2

Q.2 गद्यांश में संकेतित रिक्त स्थान (1) के लिए उपयुक्त शब्द होगा।

- Ans
1. नारकीय जीवन
 2. दुखी जीवन
 3. सुखमय जीवन
 4. असफल जीवन

Question ID : 9895809967
Chosen Option : --

Comprehension:

निम्नलिखित गद्यांश के रिक्त स्थानों की पूर्ति गद्यांश के नीचे दिए गए प्रश्नों के अनुसार कीजिए-

स्वस्थ शरीर वाला मनुष्य ही इस संसार के सुखों को भोग सकता है तथा _____ (1) बिता सकता है। स्वस्थ शरीर के लिए पौष्टिक भोजन और व्यायाम दोनों ही अति _____ (2) हैं। व्यायाम करते समय सदा कुछ _____ (3) बरतनी चाहिए। पहली सावधानी यह है कि आयु, समय व शरीर की _____ (4) के अनुसार ही व्यायाम करना चाहिए। दूसरी सावधानी यह है कि सही व्यायाम का _____ (5) करना चाहिए।

SubQuestion No : 3

Q.3 गद्यांश में संकेतित रिक्त स्थान (2) के लिए उपयुक्त शब्द होगा।

- Ans
1. आवश्यक

2. अत्यधिक
- ✓ 3. अनावश्यक
4. निरर्थक

Question ID : 9895809968
Chosen Option : --

Comprehension:

निम्नलिखित गद्यांश के रिक्त स्थानों की पूर्ति गद्यांश के नीचे दिए गए प्रश्नों के अनुसार कीजिए-

स्वस्थ शरीर वाला मनुष्य ही इस संसार के सुखों को भोग सकता है तथा _____ (1) बिता सकता है। स्वस्थ शरीर के लिए पौष्टिक भोजन और व्यायाम दोनों ही अति _____ (2) हैं। व्यायाम करते समय सदा कुछ _____ (3) बरतनी चाहिए। पहली सावधानी यह है कि आयु, समय व शरीर की _____ (4) के अनुसार ही व्यायाम करना चाहिए। दूसरी सावधानी यह है कि सही व्यायाम का _____ (5) करना चाहिए।

SubQuestion No : 4

Q.4 गद्यांश में संकेतित रिक्त स्थान (3) के लिए उपयुक्त शब्द होगा।

- Ans
1. परेशानियाँ
 2. निशानियाँ
 3. सावधानियाँ
 4. असावधानियाँ

Question ID : 9895809969
Chosen Option : --

Comprehension:

निम्नलिखित गद्यांश के रिक्त स्थानों की पूर्ति गद्यांश के नीचे दिए गए प्रश्नों के अनुसार कीजिए-

स्वस्थ शरीर वाला मनुष्य ही इस संसार के सुखों को भोग सकता है तथा _____ (1) बिता सकता है। स्वस्थ शरीर के लिए पौष्टिक भोजन और व्यायाम दोनों ही अति _____ (2) हैं। व्यायाम करते समय सदा कुछ _____ (3) बरतनी चाहिए। पहली सावधानी यह है कि आयु, समय व शरीर की _____ (4) के अनुसार ही व्यायाम करना चाहिए। दूसरी सावधानी यह है कि सही व्यायाम का _____ (5) करना चाहिए।

SubQuestion No : 5

Q.5 गद्यांश में संकेतित रिक्त स्थान (4) के लिए उपयुक्त शब्द होगा।

- Ans 1. क्षमता
 2. बुद्धि
 3. प्रतिभा
 4. ज्ञान

Question ID : 9895809970
Chosen Option : --

Comprehension:

निम्नलिखित गद्यांश के रिक्त स्थानों की पूर्ति गद्यांश के नीचे दिए गए प्रश्नों के अनुसार कीजिए-

स्वस्थ शरीर वाला मनुष्य ही इस संसार के सुखों को भोग सकता है तथा _____ (1) बिता सकता है। स्वस्थ शरीर के लिए पौष्टिक भोजन और व्यायाम दोनों ही अति _____ (2) हैं। व्यायाम करते समय सदा कुछ _____ (3) बरतनी चाहिए। पहली सावधानी यह है कि आयु, समय व शरीर की _____ (4) के अनुसार ही व्यायाम करना चाहिए। दूसरी सावधानी यह है कि सही व्यायाम का _____ (5) करना चाहिए।

SubQuestion No : 6

- Q.6 गद्यांश में संकेतित रिक्त स्थान (5) के लिए उपयुक्त शब्द होगा।

- Ans 1. विभाजन
 2. संचयन
 3. चुनाव
 4. संकलन

Question ID : 9895809971
Chosen Option : --

- Q.7 दिए गए वाक्य का वह भाग ज्ञात करें जिसमें कोई त्रुटि है।

जनसंचार माध्यम में चित्रपट अथवा सिनेमा का भी अपनी स्थान है।

- Ans 1. जनसंचार माध्यम में
 2. का भी
 3. चित्रपट अथवा सिनेमा
 4. अपनी स्थान है।

Question ID : 9895809957
Chosen Option : --

- Q.8 रिक्त स्थान को भरने के लिए उपयुक्त शब्द का चयन करें।

मैं आपका _____ आभार मानता रहूँगा।

Ans

1. सदैव
2. आजकल
3. अतीत
4. कभी

Question ID : 9895809964
Chosen Option : --

Q.9 दिए गए वाक्य का वह भाग जात करें जिसमें कोई त्रुटि है।

वृद्धा मन मारकर घर में उदास होकर अकेला बैठी थी।

Ans

1. वृद्धा मन मारकर
2. घर में
3. अकेला बैठी थी।
4. उदास होकर

Question ID : 9895809958
Chosen Option : --

Q.10 'मेघ' का पर्यावाची शब्द है-

Ans

1. भूदेव
2. वारुणी
3. वारिद
4. कानन

Question ID : 9895809975
Chosen Option : --

Q.11 रिक्त स्थान को भरने के लिए उपयुक्त शब्द का चयन करें।

सिंह एक _____ जानवर है।

Ans

1. विशाल
2. वीभत्स
3. भयानक
4. बड़ा

Question ID : 9895809963
Chosen Option : --

Q.12 'राजा' का पर्यायवाची शब्द है-

Ans

1. भूमिसुर
2. भूदेव
3. देवता
4. महीप

Question ID : 9895809974
Chosen Option : --

Q.1
3 दिए गए वाक्य में रेखांकित खंड को प्रतिस्थापित करने के लिए उपयुक्त विकल्प का चयन करें।
श्याम ईश्वर में विश्वास नहीं करता है।

- Ans 1. साकार
2. आस्तिक
3. निराकार
4. नास्तिक

Question ID : 9895809960
Chosen Option : --

Q.1
4 दिए गए वाक्य में रेखांकित खंड को प्रतिस्थापित करने के लिए उपयुक्त विकल्प का चयन करें।
राम सबको प्रिय है।

- Ans 1. कर्णप्रिय
2. सर्वप्रिय
3. असर्वप्रिय
4. मधुप्रिय

Question ID : 9895809961
Chosen Option : --

Q.1
5 'टूट पड़ना' मुहावरे का अर्थ है-

- Ans 1. आक्रमण कर देना
2. तोड़ना
3. सेना तैयार करना
4. बिखर जाना

Question ID : 9895809976
Chosen Option : --

Q.1
6 दिए गए वाक्य का वह भाग ज्ञात करें जिसमें कोई त्रुटि है।

यह आवश्यक है कि प्रेस, पत्रकारिता की आचार-संहिता और विश्वसनीयता की ध्यान रखिए।

- Ans 1. यह आवश्यक है कि
2. प्रेस, पत्रकारिता की
3. आचार-संहिता और
4. विश्वसनीयता की ध्यान रखिए।

Question ID : 9895809956
Chosen Option : --

Q.1
7

दिए गए वाक्य में रेखांकित खंड को प्रतिस्थापित करने के लिए उपयुक्त विकल्प का चयन करें।

संत वह है जो मोक्ष चाहता है।

Ans

1. मुमुक्षु
2. चक्षु
3. भिक्षुक
4. मिमांशु

Question ID : 9895809959
Chosen Option : --

Q.1
8 रिक्त स्थान को भरने के लिए उपयुक्त शब्द का चयन करें।

कवि नागार्जुन _____ वास्तविक नाम वैद्यनाथ मिश्र है।

Ans

1. के
2. की
3. को
- ✗ 4. का

Question ID : 9895809962
Chosen Option : --

Q.1
9 सही वर्तनी वाले शब्द का चयन करें।

Ans

1. चिकनाहट
2. चीकनाहठ
3. चिकनाहठ
4. चीकनाहट

Question ID : 9895809980
Chosen Option : --

Q.2
0 रिक्त स्थान को भरने के लिए उपयुक्त शब्द का चयन करें।

_____ को दण्ड देना अनुचित है।

Ans

1. निरपराध
2. निरपराधी
3. दोषी
4. निर्दोषी

Question ID : 9895809965
Chosen Option : --

Q.2
1 'अथ' शब्द का विलोम शब्द है-

Ans

1. प्रारंभ

2. इति
3. आरंभ
4. शुरू

Question ID : 9895809973
Chosen Option : --

Q.2
2 'जो सब कुछ करने की क्षमता रखता हो' के लिए एक शब्द है -

Ans

1. मालिक
2. सर्वशक्तिमान
3. भरपूर
4. नेता

Question ID : 9895809978
Chosen Option : --

Q.2
3 'जिसके हृदय में ममता नहीं है' के लिए एक शब्द है-

Ans

1. उदार
2. सदय
3. निर्मम
4. कठोर

Question ID : 9895809979
Chosen Option : --

Q.2
4 'सुमति' शब्द का विलोम है-

Ans

1. कुमति
2. क्रूर
3. मूर्ख
4. सम्मति

Question ID : 9895809972
Chosen Option : --

Q.2
5 'नौ दो ग्यारह होना' मुहावरे का अर्थ है-

Ans

1. दौड़ना
2. भाग जाना
3. चुप हो जाना
4. छुप जाना

Question ID : 9895809977
Chosen Option : --

