

PAPER-I

CODE NO: 0315PI

5

DO NOT OPEN THIS BOOKLET UNTIL YOU ARE ASKED TO DO SO

BOOKLET FOR OBJECTIVE TYPE TEST

Booklet Code

A

Answer all the Questions

Full Marks: 150

Time Allowed: 2 Hours

GENERAL INSTRUCTIONS

Candidates should read the following instructions carefully before answering the questions:-

1. Verify the seriality of the page numbers. If there is any discrepancy, bring it to the Invigilator's Notice.
2. All the boxes, ovals and the entries in the Answer Sheet must be filled up using **Black Ball-Point Pen only**.
3. Before you mark in the Answer Sheet, please fill the following in the appropriate places: -
 - Write name of the **Examination Centre**.
 - Write your **full name** in **Capital Letters**.
 - Put your **Left Thumb Impression** and **full signature**.
 - Write your **Roll No. (10 digits)** and **darken** the corresponding **10 ovals**.
 - **Darken** the **oval** corresponding to your **Category**.
 - **Darken** the **oval** corresponding to your **Booklet Code (A, B or C)**.
 - **Darken** the **oval** to denote your **Gender**.
 - If you have darkened an oval by mistake, cross it. Now darken the oval you feel correct.



4. All questions are of Multiple Choice answer type. Please darken only one of the 4 probable answers [a], [b], [c] or [d]. Darkening more than one oval means you are writing a wrong answer.
5. There will be negative marking for each wrong answer @1:4.
6. There are blank pages at the end of this Booklet for rough work. Roll. No. must be written on each blank sheet used for Rough work. The sheets should not be torn out of the Question Booklet.
7. **Hand over the OMR Answer Sheet to the Invigilator before leaving the Examination Hall.**
8. Please do not leave the Examination Hall until the examination is over.
9. Please do not fold, scratch, scrimp or tear any portion of the Answer Sheet by any chance as this will render the Answer Sheet unsuitable for computer evaluation. Keep the Sheet away from gum.
10. Please ensure that the blank dotted line along the left side of margin of side 1 as also the right side of side 2 is not damaged in any way as it may affect the computer evaluation.
11. If error is detected in any particular question the candidates are advised not to attempt the same. The Commission do not award any marks to questions having any type of error.


Please Turn Over

Set A


1. Which Mughal Emperor prohibited the use of tobacco ?
(a) Muhammad Shah
(b) Babur
(c) Jahangir
(d) Aurangzeb
2. Which of the following countries is known for very important uranium ore deposits?
(a) Canada
(b) China
(c) Pakistan
(d) Zaire
3. Which of the following article directs State Government to organize village Panchayats?
(a) Article-32
(b) Article-40
(c) Article-48
(d) Article-51
4. Who benefits the most during the inflationary period?
(a) Corporate Servants
(b) Creditors
(c) Entrepreneurs
(d) Government Servants
5. The metal used for making aircrafts and rockets is
(a) Lead
(b) Aluminium
(c) Nickel
(d) Copper
6. Just born baby has the respiratory rate as
(a) 32 times/minute
(b) 26 times/minute
(c) 18 times/minute
(d) 75 times/minute
7. Air pressure is lowest in
(a) Winter season
(b) Spring season
(c) Autumn season
(d) Summer season
8. The Nobel Peace Prize is awarded in which city?
(a) Brussels
(b) Geneva
(c) Oslo
(d) Stockholm
9. Who is the author of the book 'Romancing with Life'?
(a) Shashi Tharoor
(b) Bill Clinton
(c) Kapil Dev
(d) Dev Anand
10. The first woman to preside over the UN General Assembly
(a) Rajkumari Amrit Kaur
(b) Vijaylakshmi Pandit
(c) Kamala Nehru
(d) Indira Gandhi
11. On which of the following rivers is Bangkok located?
(a) Mekong
(b) Chao Phraya
(c) Chindwin
(d) Salween
12. Alberuni came to India with:
(a) Mohmud of Ghazni
(b) Alexander
(c) Babur
(d) Timur
13. If you wish to visit Golkonda Fort, you will have to go to which of the following states?
(a) Uttar Pradesh
(b) Karnataka
(c) Andhra Pradesh
(d) Bihar
14. The first Indian satellite to go into orbit is:
(a) Rohini
(b) Bhaskara - I
(c) Aryabhata
(d) INSAT-1A

15. The largest mosque in India is :
(a) Jama Masjid (b) Bijapur Masjid
(c) Moti Masjid (d) None of these
16. When did man first land on moon?
(a) 1954 (b) 1959
(c) 1965 (d) 1969
17. Which one of the following is the permissible level of noise in a silent zone at daytime?
(a) 50 dB (b) 60 dB
(c) 65 dB (d) 75 dB
18. A close bottle containing water at room temperature was taken to the moon and then the lid is opened water will:
(a) freeze (b) boil
(c) decompose into oxygen and hydrogen (d) no change at all
19. The animal which can tolerate more summer heat is
(a) Buffalo (b) Cow
(c) Goat (d) Donkey
20. Where is the headquarters of oil and natural gas commission?
(a) Mumbai (b) Dehradun
(c) Vadodra (d) Digboi
21. Who among the following are not protected against inflation?
(a) Salaried class (b) Industrial workers
(c) Pensioners (d) Agricultural farmers
22. The first general elections in India were held in:
(a) 1949 (b) 1950
(c) 1951 (d) 1947
23. What is the minimum age for being the member of the parliament?
(a) 21 years (b) 25 years
(c) 30 years (d) 35 years
24. The Rajya Sabha has a life of:
(a) 2 years (b) 6 years
(c) 7 years (d) permanency
25. If the President wants to resign from office, he may do so by writing to the:
(a) Vice-President (b) Chief Justice of India
(c) Prime Minister (d) Speaker of the Lok Sabha
26. Which among the following National Highways of India is the longest?
(a) NH1 (b) NH2
(c) NH3 (d) NH4
27. What is the total number of ear bones?
(a) 1 (b) 3
(c) 6 (d) 12

28. Which of the following animals has the longest life span?
 (a) Crocodile (b) Elephant
 (c) Tortoise (d) Tiger
29. How many players are there in a water-polo team?
 (a) 6 (b) 8
 (c) 11 (d) 7
30. The 'Unhappy India' is written by:
 (a) Mrs. Vijaylakshmi Pandit (b) Lala Lajpat Rai
 (c) Balgangadhar Tilak (d) Sarojini Naidu
31. Which term of the series 5,10,20,40,... is 1280?
 (a) 10th (b) 9th
 (c) 8th (d) none of these
32. Find out the wrong term in the series 4,10,22,46,96,190,382
 (a) 4 (b) 10
 (c) 96 (d) 382
33. Choose the correct alternative. Doctor : Patient :: Politician : ?
 (a) Masses (b) Voter
 (c) Power (d) Chair
34. The number of triangles in the following figure is :



- (a) 8 (b) 11
 (c) 12 (d) 15
35. The number of parallelograms in the following figure is :



- (a) 8 (b) 11 (c) 12 (d) 15
36. Find out the missing terms in the series: A,B,B,D,C,F,D,H,E, ?, ?
 (a) E,F (b) F,G
 (c) F,I (d) J,F
37. Choose the missing term: 2A11, 4D13, 12G17, ?
 (a) 36I19 (b) 36J21
 (c) 48J21 (d) 48J23

38. Choose the correct alternative in the blank spaces:

a-ba-b-b-a-b

- (a) abaab (b) abbab
(c) aabba (d) bbabb

39. Choose the correct alternative:

Anaemia : Blood : : Anarchy : ?

- (a) Lawlessness (b) Government
(c) Monarchy (d) Disorder

40. Mathematics is related to numbers in the same way as History is related to _____ :

- (a) People (b) Events
(c) Dates (d) Wars

41. Select the lettered pair that has the same relationship as the pair of words : Circle : Diameter

- (a) Rectangle : Diagonal (b) Diameter : Radius
(c) Square : Rectangle (d) Bisector : Angle

42. Which of the following is the same as Kathak, Bihu, Garbha ?

- (a) Kathakali (b) Pongal
(c) Bhangra (d) Bharatnatyam

43. If P is taller than Q, R is shorter than P, S is taller than T but shorter than Q, then who among them is the tallest ?

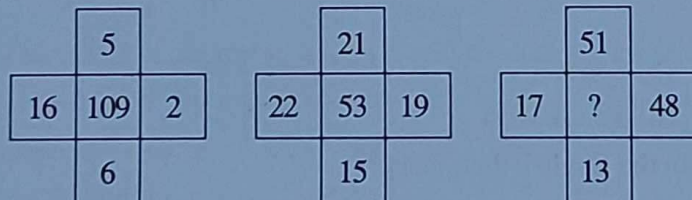
- (a) P (b) Q
(c) S (d) T

44. Choose the missing character in the following figure:

3	2	2
6	20	4
12	25	64
6	10	?

- (a) 6 (b) 8
(c) 10 (d) 12

45. Find the missing figure in the following diagram:



- (a) 7 (b) 25
(c) 49 (d) 129

46. If ZEBRA can be written as 2652181, how can COBRA be written?

- (a) 302181 (b) 3152181
(c) 31822151 (d) 1182153

47. If DRIVER = 12, PEDESTRIAN = 20, ACCODEMT = 16, then CAR=?

- (a) 3 (b) 6
(c) 8 (d) 10

48. If 'air' is called 'green', 'green' is called 'blue', 'blue' is called 'sky', 'sky' is called 'yellow', 'yellow' is called 'water' and 'water' is called 'pink', then what is the colour of clear sky ?
 (a) blue (b) sky
 (c) yellow (d) pink
49. In a certain code language, '123' means 'bright little boy', '145' means 'tall big boy' and 637 means 'beautiful little flower' which digit in that language means 'bright' ?
 (a) 1 (b) 2
 (c) 3 (d) 4
50. Pointing to a gentleman, Deepak said, "His only brother is the father of my daughter's father". How is the gentleman related to Deepak?
 (a) Grand father (b) Father
 (c) Brother-in-law (d) Uncle
51. D, the son-in-law of B, is the brother-in-law of A who is the brother of C. How is A related to B ?
 (a) Brother (b) Son
 (c) Father (d) None of these.
52. If 'A × B' means 'A is the son of B', 'A-B' means 'A is the wife of B', then P × Q-S means:
 (a) S is wife of Q (b) S is father of P
 (c) P is daughter of Q (d) Q is father of P
53. Five children are sitting in a row. S is sitting next to P but not T. K is sitting next to R who is sitting on the extreme left and T is not sitting next to K. who are sitting adjacent to S ?
 (a) K and P (b) R and P
 (c) only P (d) P & T
54. Dilip is taller than Manik but not as tall as Rohan. Ramesh is shorter than Dilip but taller than Farhan. Who among them is the shortest ?
 (a) Dilip (b) Manik
 (c) Farhan (d) Cannot be determined
55. Gopal starts from his house towards West. After walking a distance of 30 metres, he turned towards right and walked 20 metres. He then turned left and moving a distance of 10 metres, turned to his left again and walked 40 metres. He now turns to the left and walks 5 metres. Finally he turns to his left. In which direction is he walking now ?
 (a) North (b) South
 (c) East (d) South-West
56. Which of the following words will come third in the English dictionary?
 (a) Spine (b) Spinal
 (c) Spinner (d) Spindle
57. In a queue, A is eighteenth from the front while B is sixteenth from the back. If C is twenty fifth from the front and is exactly in the middle of A and B, then how many persons are there in the queue?
 (a) 45 (b) 46
 (c) 47 (d) 48
58. If 18th February, 2005 falls on Friday then what will be the day on 18th February, 2007?
 (a) Sunday (b) Monday
 (c) Tuesday (d) Wednesday

59. If + stands \times , - for \div , \times for - and \div for +, find the value of $26+74-4\times 5\div 2$
- (a) 220 (b) 376
(c) 478 (d) 488
60. If $A>B$, $B>C$ and $C>D$, then which of the following conclusions is definitely wrong?
- (a) $A>D$ (b) $A>C$
(c) $D>A$ (d) $B>D$
61. At a simple interest, a sum amounts to Rs 1012 in $2\frac{1}{2}$ years and become Rs 1067.20 in 4 yrs. What is the rate of interest ?
- (a) 2.5 % (b) 3% (c) 4% (d) 5 %
62. Neeta borrowed some money at the rate of 6 % per annum for the first 3 yr, at the rate of 9 % per annum for the next 5 yr and at the rate of 13 % per annum for the period beyond 8 yr. If she pays a total interest of Rs 8160 at the end of 11 year, how much money did she borrow ?
- (a) Rs 12000 (b) Rs 8000 (c) Rs 7000 (d) none of these
63. The population of a city increases at the rate of 5 % pa. If the present population of the city is 374440, then what was its population 3 yrs ago ?
- (a) 35000 (b) 38000
(c) 30000 (d) 32000
64. If Rs 3000 amounts to Rs 4320 at compound interest in a certain time, then Rs 3000 amounts to what in half of the time ?
- (a) Rs 3400 (b) Rs 3600 (c) Rs 3800 (d) Rs 3520
65. A student has to score 30% marks to get through. If he gets 30 marks and fails by 30 marks, then find the maximum marks set for the examination.
- (a) 100 (b) 150 (c) 200 (d) 250
66. In an examination out of 480 students, 85% of the girls and 70% of the boys passed. How many boys appeared in the examination, if total pass percentage was 75% ?
- (a) 320 (b) 340 (c) 360 (d) 370
67. Meena purchased two fans each at Rs 1200. She sold one fan at the loss of 5% and other at the gain of 10%. Find total gain or loss percent.
- (a) 1.2% loss (b) 1.2% profit (c) 2.5% profit (d) 2.5% loss
68. A merchant fixed the selling price of his item at Rs 700 after adding 40% profit to the cost price. Then he decided to fix the selling price at 10% profit. Find the new selling price.
- (a) Rs 450 (b) Rs 490 (c) Rs 500 (d) Rs 550
69. In a school, the ratio of boys and girls is 4:5. When 100 girls leave the school, the ratio becomes 6:7. How many boys are there in the school ?
- (a) 1800 (b) 1200 (c) 1000 (d) none of these
70. A and B had savings in the ratio 4: 5. They buy a gift sharing the cost in the ratio 3: 4. After that, A spent two third of his amount, while B is left with Rs 145. Then the value of the gift is
- (a) Rs 70 (b) Rs 105 (c) Rs 140 (d) Rs 175
71. A tree is 12 m tall and casts an 8 m long shadow. At the same time, a flag pole casts a 100 m long shadow. How long is the flag pole ?
- (a) 150m (b) 200 m (c) 125m (d) 115 m

72. If 10 spiders can catch 10 flies in 10 mins, then how many flies can catch 200 spiders in 200 mins ?
 (a) 2000 (b) 5000 (c) 3000 (d) 4000
73. Two trains A and B travel from points X to Y and the ratio of the speeds of A to that of B is 2: 7. Find the ratio of time taken by A and B to reach from X to Y
 (a) 2: 5 (b) 3: 5 (c) 3: 8 (d) 7:2
74. A thief is chased by a policeman from a distance of 200 m. The thief and policeman run at the speed of 10 km/h and 11 km/h respectively. The distance between them after 6 mins will be
 (a) 100 m (b) 180 m (c) 150 m (d) 125 m
75. A, B and C can complete a work in 2 hrs. If A does the job in 6 hrs and B in 5 hrs, how long will it take for C to finish the job alone ?
 (a) 5 h 30 m (b) 7 h 30 m (c) 9 hr (d) 4 h 30 m
76. X can do a work in 16 days. In how many days will the work be completed by Y, if the efficiency of Y is 60% more than that of X ?
 (a) 10 days (b) 12 days (c) 25 days (d) 30 days
77. If a, b and c are non-zero, $a + \frac{1}{b} = 1$ and $b + \frac{1}{c} = 1$ then the value of abc is
 (a) -3 (b) 1 (c) -1 (d) 3
78. If $x + \frac{a}{x} = 1$ then the value of $\frac{x^2 + x + a}{x^3 - x^2}$ is
 (a) -2 (b) $-\frac{a}{2}$ (c) $\frac{2}{a}$ (d) $-\frac{2}{a}$
79. What is the least number to be multiplied with 294 to make it a perfect square?
 (a) 2 (b) 3 (c) 6 (d) 24
80. If $(46)^2$ is subtracted from the square of a number, the answer is 485. What is the number ?
 (a) 49 (b) 51 (c) 56 (d) 53
81. Find the LCM of $\frac{2}{3}, \frac{3}{5}, \frac{4}{7}$ and $\frac{9}{13}$
 (a) 36 (b) $\frac{1}{36}$ (c) $\frac{1}{1365}$ (d) $\frac{12}{455}$
82. What is the least number which when divided by 12, 21 and 35 leaves 6 as remainder in each case ?
 (a) 426 (b) 326 (c) 536 (d) 436
83. What is the HCF of $a^2b^4 + 2a^2b^2$ and $(ab)^7 - 4a^2b^9$?
 (a) ab (b) a^2b^3 (c) a^2b^2 (d) a^3b^2
84. The LCM of $(x^3 - x^2 - 2x)$ and $(x^3 + x^2)$ is
 (a) $x^3 - x^2 - 2x$ (b) $x^2 + x$ (c) $x - 2$ (d) $x^4 - x^3 - 2x^2$
85. The average age of 8 numbers is 14. The average of 6 of these numbers is 16. What is the average of the remaining two numbers?
 (a) 8 (b) 6 (c) 12 (d) 10

86. The average age of 4 members of a family is 25 yrs. If head of the family is included in the group, then average age increased by 20%. Find out the age of the head.
(a) 45 yrs (b) 50 yrs (c) 55 yrs (d) 60 yrs
87. Express $18.\overline{48}$? in the form $\frac{m}{n}$, where m, n are integers and $n \neq 0$.
(a) $\frac{1650}{99}$ (b) $\frac{1830}{99}$ (c) $\frac{1920}{99}$ (d) none of these
88. Express $\frac{59}{27}$ in recurring decimal form.
(a) $2.\overline{105}$ (b) $2.\overline{145}$ (c) $2.\overline{165}$ (d) $2.\overline{185}$
89. The adjacent sides of a parallelogram are 36 cm and 27 cm in length. If the distance between the shorter sides is 12 cm, find the distance between the longer sides.
(a) 7 cm (b) 9 cm (c) 11 cm (d) 13 cm
90. The edges of a triangular board are 6 cm, 8 cm and 10 cm. The cost of painting it at the rate of 9 paisa per sq cm is
(a) Rs 2.16 (b) Rs 2 (c) Rs 2.48 (d) Rs 3

Identify the correct alternative to express the meaning of the given proverb / idiom.

91. To catch a tartar.
(a) To catch a dangerous person
(b) To meet with disaster
(c) To deal with a person who is more than average.
(d) None of the above.
92. A black sheep
(a) An ugly person.
(b) A lucky person.
(c) An unlucky person
(d) A disreputable member of a group.
93. Stick-in-the-mud.
(a) To make things dirty.
(b) To strengthen something.
(c) To ignore progress.
(d) None of the above.
94. To put one's hand to plough
(a) To take a difficult task.
(b) To take up farming.
(c) To take interest in technical work.
(d) To get entangled in unnecessary things.
95. Bury the hatchet.
(a) To keep something secret.
(b) To kill a near friend.
(c) To settle an argument.
(d) To control oneself.

96. To drive home.
 (a) To return to the place of rest.
 (b) Back to the original position.
 (c) To find one's roots.
 (d) To emphasise.

Pick out the word that is closest in meaning (synonym) to the words in Capital letters:

97. ABSOLVE
 (a) Solve (b) Highlight
 (c) Forgive (d) Dissolve.
98. EPISTOLARY
 (a) Emphatic (b) Focussed
 (c) Significant (d) Carried on in letters.
99. DIFFIDENT
 (a) Assured (b) Avoid
 (c) Shaky (d) Deduction
100. COMMENCE
 (a) To run (b) To end
 (c) Nearing finish (d) To begin
101. IMPEDE
 (a) Hinder (b) Recover
 (c) Detect (d) To let free.
102. INFER
 (a) Deadly (b) Envious
 (c) Sundry (d) Deduce.

Fill in the blanks with the most suitable words given below to complete the sentence:

103. He is petty, selfish and _____.
 (a) Egoistic (b) Egotistic
 (c) Egotistical (d) Egoistical
104. Give me a _____ I will burn incense.
 a) Censer b) Censor
 c) Censure d) Census
105. My role is _____ to that of my associates.
 a) Complementary b) Complimentary
 c) Complete d) Compliant.
106. His language has a _____, so people like him as an author.
 a) Flaunt b) Flare
 c) Flair d) Flutter
107. _____ among the English poets could be called the equal of Milton?
 a) Which b) Who
 c) Whom d) What

108. Why are we being served by a woman whom neither of us _____?
- (a) Liked (b) Had liked
(c) Like, (d) Likes.

Choose the correct antonym to the words in Capital letters:

109. REPRIEVE
(a) pardon (b) amnesty
(c) punish (d) forgive
110. PROFICIENT
(a) accomplished (b) incompetent
(c) export (d) efficient
111. POISE
(a) composure (b) balance
(c) imperturbability (d) awkwardness
112. OVERWROUGHT
(a) placid (b) nervous
(c) distraught (d) over excited
113. PROCLAMATION
(a) secret (b) statement
(c) bulletin (d) publication
114. INSTIGATE
(a) incite (b) activate
(c) provoke (d) discourage

Fill in the blanks using appropriate prepositions and phrasal verbs:

115. Using your mobile phone while driving is _____ the law.
(a) despite (b) beyond
(c) against (d) with
116. After payment you will receive that product _____ ten working days.
(a) during (b) into
(c) inside (d) within
117. I have no experience, so I'm _____ a disadvantage when it comes to this supervising job.
(a) in (b) on
(c) with (d) at
118. My grandparents lived in the same house _____ ages
(a) since (b) for
(c) over (d) with
119. I was _____ the impression that he is a Punjabi
(a) in (b) into
(c) under (d) underneath
120. Himesh should have learnt his lesson _____ now.
(a) to (b) by
(c) until (d) inside

121. Which of the following is not valid version of MS Office?
- Office XP
 - Office Vista
 - Office 2007
 - None of above
122. You cannot close MS Word application by
- Choosing File menu then Exit submenu
 - Press Alt+F4
 - Click X button on title bar
 - From File menu choose Close submenu
123. The key F12 opens a
- Save As dialog box
 - Open dialog box
 - Save dialog box
 - Close dialog box
124. What is the short cut key to open the Open dialog box?
- F12
 - Shift F12
 - Alt + F12
 - Ctrl + F12
125. A feature of MS Word that saves the document automatically after certain interval is available on
- Save tab on Options dialog box
 - Save As dialog box
 - Both of above
 - None of above
126. Where can you find the horizontal split bar on MS Word screen?
- On the left of horizontal scroll bar
 - On the right of horizontal scroll bar
 - On the top of vertical scroll bar
 - On the bottom of vertical scroll bar
127. Which of the following is not available on the Ruler of MS Word screen?
- Tab stop box
 - Left Indent
 - Right Indent
 - Center Indent

128. What is place to the left of horizontal scroll bar?
- Tab stop buttons
 - View buttons
 - Split buttons
 - Indicators
129. Which of the following is an absolute cell reference?
- !A!1
 - \$A\$1
 - #a#1
 - A1
130. What symbol is used before a number to make it a label?
- " (quote)
 - = (equal)
 - _ (underscore)
 - ' (apostrophe)
131. Which symbol must all formula begin with?
- =
 - +
 - (
 - @
132. Which of the following formulas is not entered correctly?
- = 10 + 50
 - = B7 * B1
 - = B7 + 14
 - 10 + 50
133. Which of the following formulas will Excel Not be able to calculate?
- = SUM(Sales)-A3
 - = SUM(A1:A5)*.5
 - = SUM(A1:A5)/(10-10)
 - = SUM(A1:A5)-10
134. Which file format can be added to a PowerPoint show?
- .jpg
 - .giv
 - .wav
 - All of the above
135. In Microsoft PowerPoint, two kind of sound effects files that can be added to the presentation are
- .wav files and .mid files
 - .wav files and .gif files
 - .wav files and .jpg files
 - .jpg files and .gif files

136. Material consisting of text and numbers is best presented as
- A table slide
 - A bullet slide
 - A title slide
 - All of the above
137. What is a motion path?
- A type of animation entrance effect
 - A method of advancing slides
 - A method of moving items on a slide
 - All of the above
138. What is a slide-title master pair?
- The title area and text area of a specific slide
 - a slide master and title master merged into a single slide
 - A slide master and title master for a specific design template
 - All of above
139. Which of the following should you use if you want the entire slide in the presentation to have the same "look" ?
- the slide layout option
 - add a slide option
 - outline view
 - a presentation design template
140. Which of the following identifies a specific web page and its computer on the Web?
- Web site
 - Web site address
 - URL
 - Domain Name
141. Which of the following terms applies to all the web pages for Amazon.com?
- Top-level domain
 - Web site
 - Web site address
 - Web domain
142. Software, such as Explorer and Firefox, are referred to as _____.
- Systems software
 - Utility software
 - Browsers
 - Internet tools
143. Which following ISP is free?
- CompuServe
 - AOL
 - NetZero
 - MSN

144. If you wanted to be part of an online community that creates an educational web site that allows its members to add to or change its information, what type of web site would you need?
- Educational or .edu
 - Social networking site
 - Wiki
 - Web 2.0
145. What Are The Different Views To Display A Table
- Datasheet View
 - Design View
 - Pivote Table & Pivot Chart View
 - All Of Above
146. Which Of The Following Creates A Drop Down List Of Values To Choose From?
- Ole Object
 - Hyperlink
 - Memo
 - Lookup Wizard
147. The Command Center Of Access File That Appears When You Create Or Open The Ms Access Database File.
- Database Window
 - Query Window
 - Design View Window
 - Switchboard
148. The Third Stage In Designing A Database Is When We Analyze Our Tables More Closely And Create A _____ Between Tables
- Relationship
 - Join
 - Query
 - None Of These
149. In A Database Table, The Category Of Information Is Called _____
- Tuple
 - Field
 - Record
 - All Of Above
150. This Key Uniquely Identifies Each Record
- Primary Key
 - Key Record
 - Unique Key
 - Field Name