

# Multi Tasking Non Technical Staff Examination 2020

Participant ID	
Participant Name	
Test Center Name	iON Digital Zone iDZ 1 Mathura Road
Test Date	12/10/2021
Test Time :	9:00 AM - 10:30 AM
Subject	MTS Non Technical 2020

Section : **General English**

**Q.1 Select the most appropriate ANTONYM of the given word.**

**GLITTERING**

- Ans  1. Shiny  
 2. Dull  
 3. Attractive  
 4. Stingy

Question ID : **65497815212**  
Chosen Option : **2**

**Q.2 Identify the segment in the sentence which contains a grammatical error.**

I have no inform about today's meeting with the managing director.

- Ans  1. about today's meeting  
 2. I have  
 3. no inform  
 4. with the

Question ID : **65497815198**  
Chosen Option : **3**

**Q.3 Select the most appropriate ANTONYM of the given word.**

**UNUSUAL**

- Ans  1. Commonplace  
 2. Questionable  
 3. Fantastic  
 4. Rare

Question ID : **65497815213**  
Chosen Option : **1**

**Q.4** Select the most appropriate word to fill in the blank.

The Health Minister has been discharged from the hospital, \_\_\_\_\_ he?

- Ans
- 1. hadn't
  - 2. hasn't
  - 3. haven't
  - 4. didn't

Question ID : 65497815202  
Chosen Option : 2

**Q.5** Select the INCORRECTLY spelt word.

- Ans
- 1. Composition
  - 2. Application
  - 3. Suspension
  - 4. Identification

Question ID : 65497815220  
Chosen Option : 3

**Q.6** Select the most appropriate word to fill in the blank.

Pravesh's teacher makes him feel as if he is \_\_\_\_\_.

- Ans
- 1. inappropriate
  - 2. influential
  - 3. invisible
  - 4. incompetent

Question ID : 65497815223  
Chosen Option : 4

**Q.7** Select the most appropriate option to substitute the underlined segment in the given sentence. If there is no need to substitute it, select 'No substitution required'.

Anurag asked me why didn't you pay the driver.

- Ans
- 1. you didn't pay
  - 2. No substitution required
  - 3. didn't I paid
  - 4. I didn't pay

Question ID : 65497816827  
Chosen Option : 1

**Q.8 Identify the segment in the sentence which contains a grammatical error.**

According to a recent survey, around 60% of children under the age of 5 years has been immunise.

- Ans
- 1. a recent survey
  - 2. under the age
  - 3. according to
  - 4. has been immunise

Question ID : 65497815200  
Chosen Option : 4

**Q.9 Select the word which means the same as the group of words given.**

One who treats and prevents diseases of the heart

- Ans
- 1. Pathologist
  - 2. Cardiologist
  - 3. Neurologist
  - 4. Pediatrician

Question ID : 65497815218  
Chosen Option : 2

**Q.10 Select the most appropriate option to substitute the underlined segment in the given sentence. If there is no need to substitute it, select 'No substitution required.'**

These days my parents are been taking great care of my health and want me to eat nuts and seeds, which are rich in vitamins and minerals.

- Ans
- 1. are taking
  - 2. No substitution required
  - 3. were taking
  - 4. will have taken

Question ID : 65497815209  
Chosen Option : 1

**Q.11 Select the most appropriate word to fill in the blank.**

I receive a lot of \_\_\_\_\_ from my family members, who are very encouraging.

- Ans
- 1. expectation
  - 2. invitation
  - 3. ambition
  - 4. inspiration

Question ID : 65497815222  
Chosen Option : 4

**Q.12 Identify the segment in the sentence which contains a grammatical error.**

Though they worked day and night to build the highway before the deadline they could not completed it.

- Ans
- 1. Though they worked
  - 2. to build the highway
  - 3. day and night
  - 4. could not completed

Question ID : 65497815199  
Chosen Option : 4

**Q.13 Select the word which means the same as the group of words given.**

Never wrong or making a mistake

- Ans
- 1. Infallible
  - 2. Incapable
  - 3. Ineligible
  - 4. Untrustworthy

Question ID : 65497815219  
Chosen Option : 1

**Q.14 Select the most appropriate option to substitute the underlined segment in the given sentence. If there is no need to substitute it, select 'No substitution required'.**

Cakes are Jaya's favourite snack, even samosas is Aparna's preferred choice.

- Ans
- 1. but samosas be
  - 2. while samosas are
  - 3. No substitution required
  - 4. either samosa are

Question ID : 65497814705  
Chosen Option : 2

**Q.15 Select the most appropriate meaning of the given idiom.**

Drop in

- Ans
- 1. Reduce in numbers
  - 2. Have very little effect
  - 3. Go back on a promise
  - 4. Pay a casual visit

Question ID : 65497815216  
Chosen Option : 1

**Q.16** Select the most appropriate word to fill in the blank.

The office superintendent asked me to leave my job application \_\_\_\_\_ him.

- Ans
- 1. behind
  - 2. to
  - 3. between
  - 4. with

Question ID : 65497815201  
Chosen Option : 2

**Q.17** Select the most appropriate meaning of the given idiom.

**A turning point**

- Ans
- 1. The time when people decide to give up plans
  - 2. The time at which an important change starts
  - 3. A change of destiny that is surprising
  - 4. A decision to turn things around

Question ID : 65497815217  
Chosen Option : 3

**Q.18** Select the most appropriate synonym of the given word.

**TRANSPARENT**

- Ans
- 1. Clear
  - 2. Shiny
  - 3. Opaque
  - 4. Pretty

Question ID : 65497815214  
Chosen Option : 1

**Q.19** Select the most appropriate synonym of the given word.

**POLLUTION**

- Ans
- 1. Aggravation
  - 2. Expansion
  - 3. Creation
  - 4. Contamination

Question ID : 65497815215  
Chosen Option : 4

**Q.20 Select the INCORRECTLY spelt word.**

- Ans  1. Justifiable  
 2. Identifiable  
 3. Legible  
 4. Eligible

Question ID : 65497815221  
Chosen Option : 2

**Comprehension:**

In the following passage some words have been deleted. Fill in the blanks with the help of the alternatives given. Select the most appropriate option for each blank.

With Covid-19 cases going down in Delhi many hospitals have (1)\_\_\_\_\_ shifting their focus to other facilities for the treatment of non-Covid patients. At a time when (2)\_\_\_\_\_ pressure of non-Covid patients continues to increase, the Municipal Corporation (3)\_\_\_\_\_ hospitals to retain back-up health workers for 100 beds and move the remaining (4)\_\_\_\_\_ to other units. This move is expected to bring relief to many patients suffering from other diseases (5)\_\_\_\_\_ cancer, heart or kidney disease, which need urgent services.

**SubQuestion No : 21**

**Q.21 Select the most appropriate option to fill in blank number 1.**

- Ans  1. starting  
 2. started  
 3. start  
 4. starts

Question ID : 65497815204  
Chosen Option : 2

**Comprehension:**

In the following passage some words have been deleted. Fill in the blanks with the help of the alternatives given. Select the most appropriate option for each blank.

With Covid-19 cases going down in Delhi many hospitals have (1)\_\_\_\_\_ shifting their focus to other facilities for the treatment of non-Covid patients. At a time when (2)\_\_\_\_\_ pressure of non-Covid patients continues to increase, the Municipal Corporation (3)\_\_\_\_\_ hospitals to retain back-up health workers for 100 beds and move the remaining (4)\_\_\_\_\_ to other units. This move is expected to bring relief to many patients suffering from other diseases (5)\_\_\_\_\_ cancer, heart or kidney disease, which need urgent services.

**SubQuestion No : 22**

**Q.22 Select the most appropriate option to fill in blank number 2.**

- Ans  1. any  
 2. a  
 3. the  
 4. some

Question ID : 65497815205  
Chosen Option : 3

**Comprehension:**

In the following passage some words have been deleted. Fill in the blanks with the help of the alternatives given. Select the most appropriate option for each blank.

With Covid-19 cases going down in Delhi many hospitals have (1)\_\_\_\_\_ shifting their focus to other facilities for the treatment of non-Covid patients. At a time when (2)\_\_\_\_\_ pressure of non-Covid patients continues to increase, the Municipal Corporation (3)\_\_\_\_\_ hospitals to retain back-up health workers for 100 beds and move the remaining (4)\_\_\_\_\_ to other units. This move is expected to bring relief to many patients suffering from other diseases (5)\_\_\_\_\_ cancer, heart or kidney disease, which need urgent services.

**SubQuestion No : 23**

**Q.23 Select the most appropriate option to fill in blank number 3.**

Ans  1. has advised

2. has advise

3. advising

4. have advised

Question ID : 65497815206  
Chosen Option : 1

**Comprehension:**

In the following passage some words have been deleted. Fill in the blanks with the help of the alternatives given. Select the most appropriate option for each blank.

With Covid-19 cases going down in Delhi many hospitals have (1)\_\_\_\_\_ shifting their focus to other facilities for the treatment of non-Covid patients. At a time when (2)\_\_\_\_\_ pressure of non-Covid patients continues to increase, the Municipal Corporation (3)\_\_\_\_\_ hospitals to retain back-up health workers for 100 beds and move the remaining (4)\_\_\_\_\_ to other units. This move is expected to bring relief to many patients suffering from other diseases (5)\_\_\_\_\_ cancer, heart or kidney disease, which need urgent services.

**SubQuestion No : 24**

**Q.24 Select the most appropriate option to fill in blank number 4.**

Ans  1. guards

2. patients

3. staff

4. members

Question ID : 65497815207  
Chosen Option : 3

**Comprehension:**

In the following passage some words have been deleted. Fill in the blanks with the help of the alternatives given. Select the most appropriate option for each blank.

With Covid-19 cases going down in Delhi many hospitals have (1)\_\_\_\_\_ shifting their focus to other facilities for the treatment of non-Covid patients. At a time when (2)\_\_\_\_\_ pressure of non-Covid patients continues to increase, the Municipal Corporation (3)\_\_\_\_\_ hospitals to retain back-up health workers for 100 beds and move the remaining (4)\_\_\_\_\_ to other units. This move is expected to bring relief to many patients suffering from other diseases (5)\_\_\_\_\_ cancer, heart or kidney disease, which need urgent services.

**SubQuestion No : 25**

**Q.25** Select the most appropriate option to fill in blank number 5.

- Ans  1. along with  
 2. as well as  
 3. such as  
 4. similar to

Question ID : 65497815208  
Chosen Option : 3

**Section : General Intelligence and Reasoning**

**Q.1** उस विकल्प का चयन कीजिए जिसका तीसरे शब्द से वही संबंध है, जो दूसरे शब्द का पहले शब्द से है।

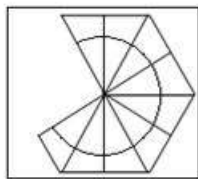
लावक : किसान :: निहाई : ?

- Ans  1. बढ़ई  
 2. घड़ीसाज़  
 3. श्रमिक  
 4. लोहार

Question ID : 65497817861  
Chosen Option : --



Q.2 Identify the option figure that completes the pattern in the question figure.



Ans

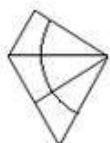
✗ 1.



✗ 2.



✗ 3.



✓ 4.



Question ID : 65497817870  
Chosen Option : 1

Q.3 Which number will replace the question mark (?) in the following number series?

16, 32, 8, 48, 6, 60, 5, ?

Ans ✓ 1. 70

✗ 2. 65

✗ 3. 75

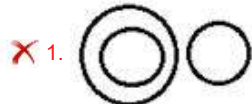
✗ 4. 60

Question ID : 65497817854  
Chosen Option : --

**Q.4** Select the Venn diagram that best illustrates the relationship among the following classes:

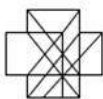
Students, Females, Teachers

**Ans**

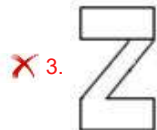
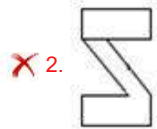
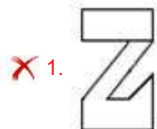


Question ID : 65497817874  
Chosen Option : 2

**Q.5** Identify the option figure which is embedded in the given figure (rotation is NOT allowed).

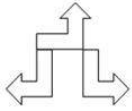


**Ans**



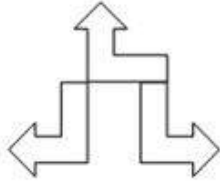
Question ID : 65497817871  
Chosen Option : 4

**Q.6** Select the correct mirror image of the given figure when the mirror is placed to the right side of the figure.

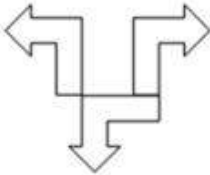


**Ans**

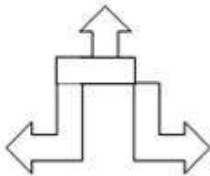
✓ 1.



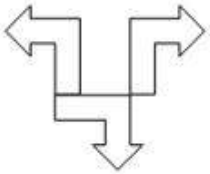
✗ 2.



✗ 3.



✗ 4.



Question ID : 65497817872  
Chosen Option : 1

**Q.7** In a certain code language, if MATERIAL is written as QDXHVLDP, then how will ONTOLOGY be written in the same code language?

- Ans**
- ✗ 1. RMSRORJB
  - ✗ 2. SRXSPSKC
  - ✗ 3. RRSSOSGC
  - ✓ 4. RRRPRKCC

Question ID : 65497817857  
Chosen Option : --

**Q.8** The first semester scores of six students indicated that Raman scored higher than Ritesh, but he is second lower to Harshita. If Ankur is the lowest scorer, then what is the position of Raghav?

- Ans**
- ✗ 1. Just below Ritesh
  - ✓ 2. Just above Raman
  - ✗ 3. Between Raman and Ritesh
  - ✗ 4. Just above Harshita

Question ID : 65497817866  
Chosen Option : 1

**Q.9** Two statements are given, followed by three conclusions numbered I, II and III. Assuming the statements to be true, even if they seem to be at variance with commonly known facts, decide which of the conclusions logically follow(s) from the statements.

**Statements:**

All Birds are Sparrows.  
All Sparrows are Reptiles.

**Conclusions:**

I. Some Reptiles are Birds.  
II. All Reptiles are Sparrows.  
III. All Birds are Reptiles.

- Ans**
- 1. Both conclusions II and III follow.
  - 2. Both conclusions I and II follow.
  - 3. Neither conclusion I, nor II, and III follow.
  - 4. Both conclusions I and III follow.

Question ID : 65497817865  
Chosen Option : 4

**Q.10** Select the option in which the numbers are related in the same way as are the numbers of the following set.

(192, 140, 252)

- Ans**
- 1. (165, 118, 221)
  - 2. (186, 134, 246)
  - 3. (165, 140, 192)
  - 4. (221, 192, 252)

Question ID : 65497817853  
Chosen Option : 2

**Q.11** If in a coding system, SHELVES is coded as 1919515222219, and NOMINEE is coded as 1412131814225, then how will SEIZURE be coded in the same coding system?

- Ans**
- 1. 8518266185
  - 2. 19229262185
  - 3. 1922912195
  - 4. 8221816922

Question ID : 65497817859  
Chosen Option : 2

**Q.12** In a certain code language, if EXTRNSIC is written as CIXESNRT, then how will LEFTWING be written in the same code language?

- Ans**
- 1. GNELIWTF
  - 2. ELGNTFIW
  - 3. GNIWTFEL
  - 4. TFELGNIW

Question ID : 65497817856  
Chosen Option : 1

**Q.13** Two statements are given, followed by two conclusions numbered I and II. Assuming the statements to be true, even if they seem to be at variance with commonly known facts, decide which of the conclusions logically follow(s) from the statements.

**Statements:**

All Machines are Tools.  
No Tool is a Computer.

**Conclusions:**

I. No Machine is a Computer.  
II. Some Computers are Tools.

**Ans**  1. Only conclusion I follows.

2. Both conclusions I and II follow.

3. Neither conclusion I nor II follows.

4. Only conclusion II follows.

Question ID : 65497817864

Chosen Option : 1

**Q.14** Which number will replace the question mark (?) in the following number series?

256, 123, 66, ?, 18, 6

**Ans**  1. 32

2. 27

3. 29

4. 33

Question ID : 65497817855

Chosen Option : 4

**Q.15** The Coordinator of an International Virtual Conference has planned six guest lectures on different areas—Cryptography, Fluid Dynamics, Big Data Analysis, Wavelet Theory, Differential Equations and Linear Algebra—to be organised only one on each day from Monday to Sunday.

Wavelet Theory should be organised immediately after Differential Equations.

Big Data Analysis should be organised on Wednesday and should not be followed by Linear Algebra.

Fluid Dynamics should be organised on Friday and there should be a gap of two days between Cryptography and Linear Algebra.

One day there will be no lecture (Saturday is not that day), and just before that day Linear Algebra will be organised.

How many lectures are organised between Big Data Analysis and Wavelet Theory?

**Ans**  1. Three

2. One

3. Four

4. Two

Question ID : 65497817868

Chosen Option : 1

Q.16 Select the option that is related to the third letter-cluster in the same way as the second letter-cluster is related to the first letter-cluster.

PHONETIC : FLWHQRKS :: SHEEPDOG : ?

- Ans  1. JRVKGSHH  
 2. JRGSHHKV  
 3. VKRJHHS  
 4. VKHHSGRJ

Question ID : 65497817860  
Chosen Option : 2

Q.17 If in a coding system, OPULENT is coded as 84 and LEARNER is coded as 114, then how will PHYSICS be coded in the same coding system?

- Ans  1. 97  
 2. 88  
 3. 99  
 4. 90

Question ID : 65497817858  
Chosen Option : 2

Q.18 Which two digits can be interchanged so as to balance the given equation?

$$186 \div 17 + 104 - 12 \times 3 = 16$$

- Ans  1. 2 and 7  
 2. 8 and 3  
 3. 6 and 4  
 4. 4 and 7

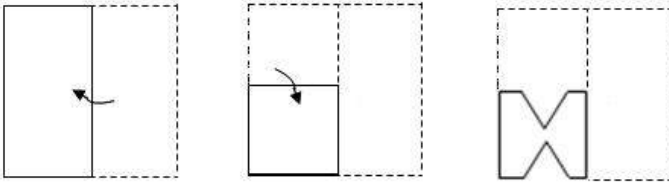
Question ID : 65497817850  
Chosen Option : 2

Q.19 Seven persons are sitting along the sides of a heptagon table facing the centre. D is second to the right of A, and B is second to the right of F, who is to the immediate right of A. If G and C are sitting adjoining, C being second to the left of A, then what is the sitting position of E?

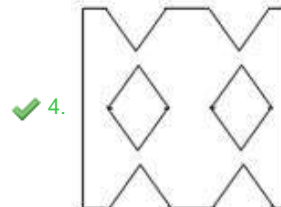
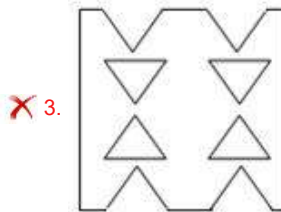
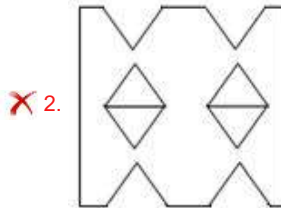
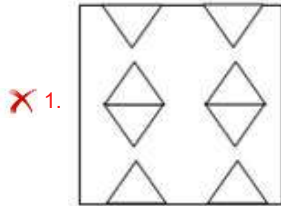
- Ans  1. Immediate left of F  
 2. Immediate right of C  
 3. Immediate right of A  
 4. Immediate left of B

Question ID : 65497817867  
Chosen Option : 2

Q.20 A paper is folded and cut as shown below. How will it appear when unfolded?



Ans



Question ID : 65497817873  
Chosen Option : 4

Q.21 Which letter-cluster will replace the question mark (?) in the following series?

HEA, JGC, LIE, ?

Ans ✓ 1. NKG

✗ 2. PLI

✗ 3. EBX

✗ 4. DAW

Question ID : 65497817863  
Chosen Option : 1

**Q.22** Select the correct sequence of mathematical signs to sequentially replace the letters A, B, C, D and E so as to balance the given equation.

$$(38 A 17) B 9 C 117 D 13 E 94 = 104$$

- Ans
- 1.  $\times, \div, +, -, -$
  - 2.  $+, \div, \times, +, -$
  - 3.  $-, \times, +, \div, -$
  - 4.  $\times, -, \div, +, -$

Question ID : 65497817851  
Chosen Option : 3

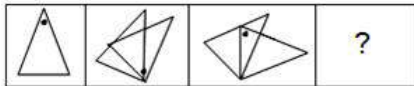
**Q.23** Which of the given options is the most suitable to fill in the blank?

$$16 : 128 :: 4 : \underline{\hspace{2cm}}$$

- Ans
- 1. 40
  - 2. 14
  - 3. 8
  - 4. 26

Question ID : 65497817852  
Chosen Option : 3

**Q.24** Select the figure that will replace the question mark (?) in the following figure series.



- Ans
- 1.
  - 2.
  - 3.
  - 4.

Question ID : 65497817869  
Chosen Option : 4



**Q.25** Which of the given options is the most suitable to fill in the blank?

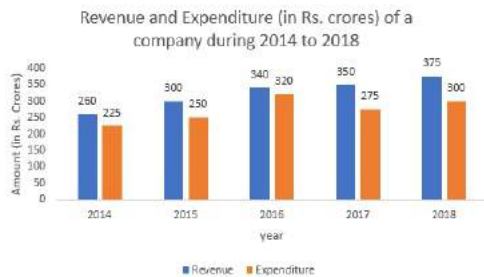
Newspaper : Press :: Cloth : \_\_\_\_\_

- Ans
- 1. Shop
  - 2. Fibre
  - 3. Mill
  - 4. Tailor

Question ID : 65497817862  
Chosen Option : 3

Section : Numerical Aptitude

**Q.1** Study the following graph and answer the question that follows.



In which year is the percentage increase in the revenue, as compared to that in the preceding year, between 1% and 3%?

- Ans
- 1. 2015
  - 2. 2017
  - 3. 2018
  - 4. 2016

Question ID : 65497816283  
Chosen Option : 2

**Q.2** The cost price of 30 articles is the same as the selling price of x articles. If the profit is 25%, then the value of x is:

- Ans
- 1. 18
  - 2. 30
  - 3. 24
  - 4. 25

Question ID : 65497816267  
Chosen Option : 3

**Q.3** Three articles are bought at ₹180 each. One of them is sold at a loss of 10%. If the other two articles are sold so as to gain 25% on the whole transaction, then what is the gain percentage on the two articles?

- Ans
- 1. 30%
  - 2. 42.5%
  - 3. 37.5%
  - 4. 45%

Question ID : 65497816268  
Chosen Option : 2

**Q.4** A person invested a sum of ₹6,500 at  $x\%$  per annum at simple interest and a sum of ₹7,500 at  $(x - 2)\%$  per annum at simple interest. If the total interest earned on both the investments for 3 years is ₹3,750, then the rate of interest on the first investment is:

- Ans**
- 1. 14%
  - 2. 10%
  - 3. 8%
  - 4. 12%

Question ID : 65497816273  
Chosen Option : 2

**Q.5** What is the simplified value of  $\left\{ \left( 1 - \frac{2}{15} \right) + \frac{2}{5} \right\} \div \frac{14}{15} + \left( \frac{2}{3} \text{ of } \frac{6}{7} \div \frac{4}{9} - \frac{1}{6} \times 1\frac{5}{7} \right)$ ?

- Ans**
- 1.  $\frac{11}{15}$
  - 2.  $\frac{33}{14}$
  - 3. 2
  - 4.  $\frac{1}{2}$

Question ID : 65497817391  
Chosen Option : 2

**Q.6** The curved surface area of a right circular cone is  $65\pi \text{ cm}^2$  and the radius of its base is 5 cm. What is half of the volume of the cone, in  $\text{cm}^3$ ?

- Ans**
- 1.  $50\pi$
  - 2.  $100\pi$
  - 3.  $180\pi$
  - 4.  $45\pi$

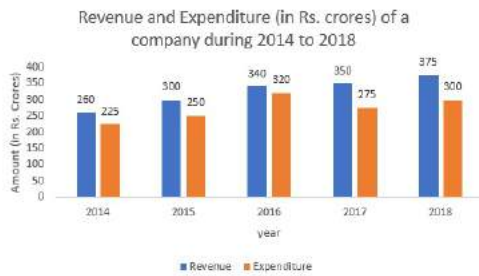
Question ID : 65497816277  
Chosen Option : 1

**Q.7** A girl spends 76% of her income. If her income increases by 18% and her expenditure increases by 25%, then what is the percentage increase or decrease in her savings (correct to one decimal place)?

- Ans**
- 1. 6.9%, decrease
  - 2. 4.2%, decrease
  - 3. 5.7%, increase
  - 4. 8.4%, increase

Question ID : 65497816266  
Chosen Option : 2

Q.8 Study the following graph and answer the question that follows.



The expenditure of the company in 2016 is what percentage more than the average revenue (per year) in 2014, 2015 and 2018 (correct to the nearest integer)?

- Ans
- ✓ 1. 3%
  - ✗ 2. 5%
  - ✗ 3. 6%
  - ✗ 4. 4%

Question ID : 65497816282  
Chosen Option : 1

Q.9 A single discount equivalent to three simple discounts of 10%, 12% and 15% is:

- Ans
- ✓ 1. 32.68%
  - ✗ 2. 34.17%
  - ✗ 3. 37%
  - ✗ 4. 35.36%

Question ID : 65497816265  
Chosen Option : 1

Q.10 A train can travel 40% faster than a car. Both the train and the car start from point A at the same time and reach point B, which is 70 km away from point A, at the same time. On the way, however, the train lost about 15 minutes while stopping at stations. The speed of the car in km/h is:

- Ans
- ✗ 1. 120
  - ✓ 2. 80
  - ✗ 3. 90
  - ✗ 4. 100

Question ID : 65497816262  
Chosen Option : --

Q.11 6 व्यक्तियों का औसत वजन तब 2.5 kg बढ़ जाता है जब 55 kg वजन वाले एक व्यक्ति के स्थान पर एक नया व्यक्ति आ जाता है। नए व्यक्ति का वजन (kg में) कितना हो सकता है?

- Ans
- ✓ 1. 70
  - ✗ 2. 62.5
  - ✗ 3. 60
  - ✗ 4. 75.5

Question ID : 65497816264  
Chosen Option : 1

**Q.12** The mean of 100 items is 47. It was discovered that three items which should have been 60, 70, 80 were wrongly read as 40, 20, 50, respectively. The correct mean is:

- Ans
- 1. 48
  - 2. 47
  - 3. 50
  - 4. 51

Question ID : 65497816274

Chosen Option : 1

**Q.13** Two numbers are, respectively, 17% and 50% more than a third number. The ratio of the two numbers is:

- Ans
- 1. 39 : 50
  - 2. 50 : 39
  - 3. 59 : 39
  - 4. 39 : 59

Question ID : 65497816269

Chosen Option : 1

**Q.14** A, B and C can do a piece of work in 10, 15 and 30 days, respectively. If B and C both assist A on every third day, then in how many days can the work be completed?

- Ans
- 1.  $8\frac{1}{2}$
  - 2. 5
  - 3. 8
  - 4.  $7\frac{1}{2}$

Question ID : 65497816260

Chosen Option : 3

**Q.15** एक राशि (र में) A, B और C के बीच 5 : 6 : 7 के अनुपात में वितरित की जाती है। यदि B अपने हिस्से में से ₹400 की धनराशि C को देता है, तो A, B और C के हिस्सों का अनुपात 2 : 3 : 4 हो जाता है। शुरुआत में, A और C के हिस्सों (र में) का योग कितना था?

- Ans
- 1. 7,200
  - 2. 14,000
  - 3. 8,400
  - 4. 11,200

Question ID : 65497816271

Chosen Option : --

Q.16 The value of  $5\frac{5}{29} - \left[ \frac{15}{4} \div \left\{ \frac{3}{4} \times \left( \frac{3}{2} - \frac{1}{5} - \frac{1}{3} \right) \right\} \right]$  is:

- Ans
- 1. 5
  - 2. 1
  - 3. 0
  - 4. 10

Question ID : 65497815269

Chosen Option : 3

Q.17 A fruit seller has a sale of ₹10,435, ₹9,927, ₹10,855, ₹10,230 and ₹9,562 for five consecutive months. How much sale (in ₹) must he have in the sixth month so that he gets an average sale of ₹10,500?

- Ans
- 1. 9,231
  - 2. 8,231
  - 3. 8,991
  - 4. 11,991

Question ID : 65497816263

Chosen Option : 4

Q.18 If A and B can do a piece of work in 20 days, and A alone can do the same work in 30 days, then in how many days can B alone complete the same work?

- Ans
- 1. 60
  - 2. 40
  - 3. 75
  - 4. 50

Question ID : 65497816259

Chosen Option : 1

Q.19 The incomes of A and B are in the ratio 3 : 4, and their expenditures are in the ratio 9 : 5. If the income of A is equal to three times the expenditure of B, then what is the ratio of the savings of A and B?

- Ans
- 1. 5 : 2
  - 2. 3 : 5
  - 3. 5 : 3
  - 4. 2 : 5

Question ID : 65497816270

Chosen Option : 4

**Q.20** A hall is 18 m long and 12 m broad. If the sum of the areas of the floor and the ceiling is equal to the sum of the areas of the four walls, the volume (in  $\text{m}^3$ ) of the hall is:

- Ans
- 1. 1175.5
  - 2. 1876.2
  - 3. 1555.2
  - 4. 1376.4

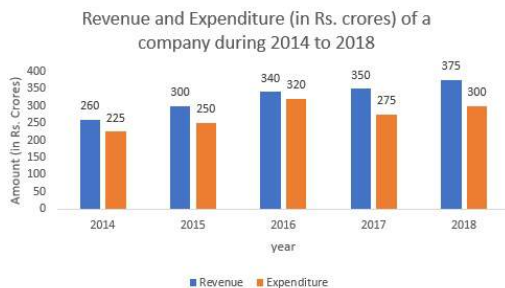
Question ID : 65497816275  
Chosen Option : 3

**Q.21** Let  $x$  be the least number divisible by 8, 12, 30, 36 and 45 and  $x$  is also a perfect square. What is the value of  $x$ ?

- Ans
- 1. 3600
  - 2. 4900
  - 3. 2500
  - 4. 4225

Question ID : 65497816278  
Chosen Option : 1

**Q.22** Study the following graph and answer the question that follows.



What is the ratio of the total revenue of the company in 2016 and 2018 to that of the total expenditure in 2015 and 2017?

- Ans
- 1. 143 : 105
  - 2. 130 : 103
  - 3. 115 : 114
  - 4. 105 : 143

Question ID : 65497816281  
Chosen Option : 1

**Q.23** A field is in the form of a circle. The cost of fencing around it at ₹11 per metre is ₹2,420. What is the area (in  $\text{m}^2$ ) of the field? (Take  $\pi = \frac{22}{7}$ )

- Ans
- 1. 3850
  - 2. 4500
  - 3. 4250
  - 4. 2700

Question ID : 65497816276  
Chosen Option : 1

**Q.24** A person crosses a 900-metre long street in 6 minutes. The speed of the person in km/h is:

- Ans
- 1. 9
  - 2. 10
  - 3. 15
  - 4. 12

Question ID : 65497816261

Chosen Option : 1

**Q.25** What is the difference (in ₹) between the compound interest, when interest is compounded 6-monthly, and the simple interest on a sum of ₹10,000 for  $1\frac{1}{2}$  years at 10% p.a.?

- Ans
- 1. 102.25
  - 2. 87
  - 3. 76.25
  - 4. 91.5

Question ID : 65497816272

Chosen Option : 3

Section : General Awareness

**Q.1** In which year was the South Asian Association for Regional Cooperation (SAARC) established?

- Ans
- 1. 1987
  - 2. 1985
  - 3. 1980
  - 4. 1983

Question ID : 65497814679

Chosen Option : 2

**Q.2** Which of the following minerals has kieserite as its ore?

- Ans
- 1. Silver
  - 2. Magnesium
  - 3. Potassium
  - 4. Iron

Question ID : 65497814683

Chosen Option : --

**Q.3** Which of the following is a dwarf planet in our solar system?

- Ans
- 1. Europa
  - 2. Callisto
  - 3. Makemake
  - 4. Ganymede

Question ID : 65497814685

Chosen Option : --

**Q.4 With which of the following type of fuels is the device named 'tokamak' associated?**

- Ans  1. Hydel  
 2. Tidal  
 3. Geothermal  
 4. Atomic

Question ID : 65497814686

Chosen Option : --

**Q.5 Who was the Pro-tem speaker of the 16th Lok Sabha?**

- Ans  1. Meira Kumar  
 2. M Thambidurai  
 3. Kamal Nath  
 4. Manohar Parrikar

Question ID : 65497814680

Chosen Option : 2

**Q.6 Which of the following wetlands is located in Kerala?**

- Ans  1. Nandur Madhameshwar  
 2. Hokera Wetland  
 3. Sasthamkotta Lake  
 4. Sandi Bird Sanctuary

Question ID : 65497814689

Chosen Option : --

**Q.7 Priyadarshini Govind, who was conferred the 'Nritya Kalanidhi' title by The Music Academy in 2019, is a well-known \_\_\_\_\_ dancer.**

- Ans  1. Kathakali  
 2. Kuchipudi  
 3. Bharatnatyam  
 4. Kathak

Question ID : 65497814669

Chosen Option : --

**Q.8 On which of the following rivers is Pakistan constructing a dam named 'Diamer Basha' dam?**

- Ans  1. Indus  
 2. Jhelum  
 3. Sutlej  
 4. Chenab

Question ID : 65497814687

Chosen Option : 1



**Q.9 With which of the following games is the Duckworth-Lewis-Stern method associated?**

- Ans  1. Football  
 2. Hockey  
 3. Polo  
 4. Cricket

Question ID : 65497814671  
Chosen Option : 4

**Q.10 Of the following battles fought by Akbar, which one was the latest as compared to the rest of the battles?**

- Ans  1. Battle of Tukaroi  
 2. Battle of Haldighati  
 3. Battle of Thanesar  
 4. Second Battle of Panipat

Question ID : 65497814691  
Chosen Option : 2

**Q.11 Of the following sites of Harappan Civilization, which one is NOT located in Pakistan?**

- Ans  1. Kot Diji  
 2. Chanhudaro  
 3. Shortughai  
 4. Balakot

Question ID : 65497814692  
Chosen Option : 2

**Q.12 Unsaturated carbon compounds burn with a:**

- Ans  1. orange sooty flame  
 2. white sooty flame  
 3. red sooty flame  
 4. yellow sooty flame

Question ID : 65497814684  
Chosen Option : --

**Q.13 In which of the following states is the festival called 'Yaoshang' traditionally celebrated?**

- Ans  1. Sikkim  
 2. Chhattisgarh  
 3. Jharkhand  
 4. Manipur

Question ID : 65497814670  
Chosen Option : --

**Q.14 As on September 2021, who is the CEO of NITI Aayog?**

- Ans  1. Amitabh Kant  
 2. Urjit Patel  
 3. Shaktikanta Das  
 4. Dr. Rajiv Kumar

Question ID : 65497814474  
Chosen Option : 1

**Q.15 Which of the following is NOT a property of graphite?**

- Ans  1. It is a conductor of electricity.  
 2. It has low melting point.  
 3. It has a lower density than diamond.  
 4. It is a conductor of heat..

Question ID : 65497814682  
Chosen Option : 2

**Q.16 In which year was the first meeting of National Integration Council held?**

- Ans  1. 1955  
 2. 1962  
 3. 1951  
 4. 1965

Question ID : 65497814681  
Chosen Option : 3

**Q.17 To which of the following incarnations of Vishnu is Dhanuyatra of Odisha's Bargarh district dedicated?**

- Ans  1. Lord Rama  
 2. Lord Vamana  
 3. Lord Varaha  
 4. Lord Krishna

Question ID : 65497814668  
Chosen Option : 4

**Q.18 Who among the following was the founder of Prarthana Samaj?**

- Ans  1. MG Ranade  
 2. RC Bhandarkar  
 3. Atmaram Pandurang  
 4. Jyotiba Phule

Question ID : 65497814690  
Chosen Option : 3

Q.19 \_\_\_\_\_ is a type of fraud where a small electronic device is used to steal debit/credit card information during an authorised banking transaction.

- Ans  1. Phishing  
 2. Skimming  
 3. Smishing  
 4. Vishing

Question ID : 65497816596  
Chosen Option : 1

Q.20 In which year was 'Project Elephant' launched by the Government of India as a Centrally Sponsored Scheme?

- Ans  1. 1984  
 2. 1992  
 3. 1988  
 4. 1997

Question ID : 65497814688  
Chosen Option : 2

Q.21 Who among the following is the author of the book titled 'Speaking Truth to Power: My Alternative View'?

- Ans  1. Subramanian Swamy  
 2. Mani Shankar Aiyar  
 3. P Chidambaram  
 4. Arun Shourie

Question ID : 65497814675  
Chosen Option : --

Q.22 The 'Amrita Devi Bishnoi National Award ' is given for:

- Ans  1. environment protection  
 2. energy protection  
 3. wildlife protection  
 4. biodiversity protection

Question ID : 65497814673  
Chosen Option : --

Q.23 The Union Sports Ministry has decided to set up Khelo India State Centres of Excellence (KISCE) in eight states in the first leg of the Khelo India Scheme. Which of the following is NOT one of these eight states?

- Ans  1. Andhra Pradesh  
 2. Karnataka  
 3. Odisha  
 4. Nagaland

Question ID : 65497814672  
Chosen Option : --

**Q.24 Ken Shimura, the renowned comedian who died in March 2020, was a national of:**

- Ans**
- 1. China
  - 2. Japan
  - 3. Indonesia
  - 4. South Korea

Question ID : **65497814674**  
Chosen Option : --

**Q.25 Of the following abbreviations, which one is primarily an umbrella organisation for operating retail payments and settlement systems in India?**

- Ans**
- 1. NPCI
  - 2. NABARD
  - 3. SIDBI
  - 4. IRDAI

Question ID : **65497814678**  
Chosen Option : 1

# Multi Tasking Non Technical Staff Examination 2020

Participant ID	
Participant Name	
Test Center Name	TCS Gito Bitan
Test Date	12/10/2021
Test Time :	12:30 PM - 2:00 PM
Subject	MTS Non Technical 2020

Section : **General English**

**Q.1 Identify the segment that contains a grammatical error. If there is no error, select 'No error'.**

**Children has to bring their own food.**

- Ans  1. to bring  
 2. Children has  
 3. their own food  
 4. No error

Question ID : **65497816915**  
Chosen Option : **2**

**Q.2 Select the most appropriate meaning of the given idiom.**

**To be taken aback**

- Ans  1. To be excited  
 2. To be irritated  
 3. To be nervous  
 4. To be surprised

Question ID : **65497816933**  
Chosen Option : **4**

**Q.3 Select the most appropriate synonym of the given word.**

**RAPTUROUS**

- Ans  1. Delighted  
 2. Worried  
 3. Agitated  
 4. Disgusted

Question ID : **65497816932**  
Chosen Option : **2**

**Q.4** Select the most appropriate option to fill in the blank.

Problems often \_\_\_\_\_ when you least expect them.

- Ans  1. raise  
 2. arise  
 3. rise  
 4. arouse

Question ID : 65497816940  
Chosen Option : 2

**Q.5** Select the most appropriate word for the given group of words.

Imaginary line dividing Earth into northern and southern hemispheres

- Ans  1. Longitude  
 2. Equator  
 3. Axis  
 4. Latitude

Question ID : 65497816935  
Chosen Option : 2

**Q.6** Select the most appropriate option to fill in the blank.

\_\_\_\_\_ this water looks clean, it may be contaminated.

- Ans  1. In case  
 2. Despite  
 3. Although  
 4. Because

Question ID : 65497816919  
Chosen Option : 3

**Q.7** Select the INCORRECTLY spelt word.

- Ans  1. Leave  
 2. Lease  
 3. Leagend  
 4. Legacy

Question ID : 65497816937  
Chosen Option : 3

**Q.8** Select the most appropriate option to substitute the underlined segment in the given sentence.

Srilekha is Mr. Singhs daughter.

- Ans
- 1. Mr. Singh
  - 2. Mr. Singhs'
  - 3. Mr. Singh's
  - 4. Mr. Singhs's

Question ID : 65497817735  
Chosen Option : 3

**Q.9** Select the most appropriate word for the given group of words.

To get ready

- Ans
- 1. Pretend
  - 2. Preserve
  - 3. Protect
  - 4. Prepare

Question ID : 65497816936  
Chosen Option : 4

**Q.10** Identify the segment that contains a grammatical error. If there is no error, select 'No error'.

I was watching a whole scene very carefully.

- Ans
- 1. No error
  - 2. a whole scene
  - 3. very carefully
  - 4. I was watching

Question ID : 65497816916  
Chosen Option : 2

**Q.11** Select the most appropriate ANTONYM of the given word.

**RADIANCE**

- Ans
- 1. Brilliance
  - 2. Glow
  - 3. Dullness
  - 4. Glitter

Question ID : 65497816930  
Chosen Option : 3

Q.12 Identify the segment that contains a grammatical error. If there is no error, select 'No error'.

Who has distributed these sweets among the children?

- Ans  1. No error  
 2. among the children  
 3. Who has distributed  
 4. these sweets

Question ID : 65497816917  
Chosen Option : 1

Q.13 Select the most appropriate ANTONYM of the given word.

PRECISE

- Ans  1. Actual  
 2. Correct  
 3. Definite  
 4. Vague

Question ID : 65497816929  
Chosen Option : 4

Q.14 Select the most appropriate option to fill in the blank.

I stayed \_\_\_\_\_ my uncle's house last night.

- Ans  1. at  
 2. on  
 3. in  
 4. by

Question ID : 65497816918  
Chosen Option : 1

Q.15 Select the most appropriate option to substitute the underlined segment in the given sentence. If there is no need to substitute it, select 'No substitution required.'

Priya had strong enough to fight all odds and succeed in meeting her goals in life.

- Ans  1. has stronger  
 2. No substitution required  
 3. is strength  
 4. was strong

Question ID : 65497815514  
Chosen Option : 4



**Q.16** Select the most appropriate option to fill in the blank.

If my memory \_\_\_\_\_ me right, Abhimanyu was not killed by one person but by seven warriors.

- Ans  1. serves  
 2. makes  
 3. supports  
 4. finds

Question ID : 65497816939  
Chosen Option : 1

**Q.17** Select the most appropriate option to substitute the underlined segment in the given sentence. If there is no need to substitute it, select 'No substitution required'.

The sun is very large than Earth.

- Ans  1. very larger than  
 2. No substitution required  
 3. much larger than  
 4. much large as

Question ID : 65497816926  
Chosen Option : 3

**Q.18** Select the INCORRECTLY spelt word.

- Ans  1. Offshoot  
 2. Officiate  
 3. Offfance  
 4. Offspring

Question ID : 65497816938  
Chosen Option : 3

**Q.19** Select the most appropriate meaning of the given idiom.

In the eye of the storm

- Ans  1. Be involved in discussion  
 2. Be calm in difficulty  
 3. Be in a controversial situation  
 4. Be the centre of attraction

Question ID : 65497816934  
Chosen Option : 2

**Q.20 Select the most appropriate synonym of the given word.**

**PACIFY**

- Ans  1. Upset  
 2. Irritate  
 3. Soothe  
 4. Excite

Question ID : 65497816931  
Chosen Option : 3

**Comprehension:**

In the following passage some words have been deleted. Fill in the blanks with the help of the alternatives given. Select the most appropriate option for each blank.

The department of post has (1)\_\_\_\_\_ inter-city road transport of parcels from Calcutta to Guwahati, Bhubaneswar and Patna. The inter-city (2)\_\_\_\_\_ of parcels by road (3)\_\_\_\_\_ amid the inability of the railways (4)\_\_\_\_\_ adequate space and the preference given (5)\_\_\_\_\_ the airways to perishable commodities.

**SubQuestion No : 21**

**Q.21 Select the most appropriate option to fill in blank no. 1.**

- Ans  1. started  
 2. start  
 3. starting  
 4. to starting

Question ID : 65497816921  
Chosen Option : 1

**Comprehension:**

In the following passage some words have been deleted. Fill in the blanks with the help of the alternatives given. Select the most appropriate option for each blank.

The department of post has (1)\_\_\_\_\_ inter-city road transport of parcels from Calcutta to Guwahati, Bhubaneswar and Patna. The inter-city (2)\_\_\_\_\_ of parcels by road (3)\_\_\_\_\_ amid the inability of the railways (4)\_\_\_\_\_ adequate space and the preference given (5)\_\_\_\_\_ the airways to perishable commodities.

**SubQuestion No : 22**

**Q.22 Select the most appropriate option to fill in blank no. 2.**

- Ans  1. moves  
 2. move  
 3. movement  
 4. moving

Question ID : 65497816922  
Chosen Option : 3

**Comprehension:**

In the following passage some words have been deleted. Fill in the blanks with the help of the alternatives given. Select the most appropriate option for each blank.

The department of post has (1)\_\_\_\_\_ inter-city road transport of parcels from Calcutta to Guwahati, Bhubaneswar and Patna. The inter-city (2)\_\_\_\_\_ of parcels by road (3)\_\_\_\_\_ amid the inability of the railways (4)\_\_\_\_\_ adequate space and the preference given (5)\_\_\_\_\_ the airways to perishable commodities.

**SubQuestion No : 23****Q.23 Select the most appropriate option to fill in blank no. 3.****Ans**  1. was coming 2. comes 3. is coming 4. come

Question ID : 65497816923

Chosen Option : 2

**Comprehension:**

In the following passage some words have been deleted. Fill in the blanks with the help of the alternatives given. Select the most appropriate option for each blank.

The department of post has (1)\_\_\_\_\_ inter-city road transport of parcels from Calcutta to Guwahati, Bhubaneswar and Patna. The inter-city (2)\_\_\_\_\_ of parcels by road (3)\_\_\_\_\_ amid the inability of the railways (4)\_\_\_\_\_ adequate space and the preference given (5)\_\_\_\_\_ the airways to perishable commodities.

**SubQuestion No : 24****Q.24 Select the most appropriate option to fill in blank no. 4.****Ans**  1. providing 2. provide 3. provided 4. to provide

Question ID : 65497816924

Chosen Option : 1

**Comprehension:**

In the following passage some words have been deleted. Fill in the blanks with the help of the alternatives given. Select the most appropriate option for each blank.

The department of post has (1)\_\_\_\_\_ inter-city road transport of parcels from Calcutta to Guwahati, Bhubaneswar and Patna. The inter-city (2)\_\_\_\_\_ of parcels by road (3)\_\_\_\_\_ amid the inability of the railways (4)\_\_\_\_\_ adequate space and the preference given (5)\_\_\_\_\_ the airways to perishable commodities.

**SubQuestion No : 25****Q.25 Select the most appropriate option to fill in blank no. 5.****Ans**  1. with 2. by 3. in 4. from

Question ID : 65497816925

Chosen Option : 2

**Q.1** Some persons are sitting beside a round table facing the centre. S is sitting just opposite of R, who is immediate left of Q. T is sitting immediate right of Q. If U is exactly in opposite of Q, then what is the sitting location of P?

- Ans**
- 1. Left of U
  - 2. Between S and T
  - 3. Right of R
  - 4. Between U and R

Question ID : 65497817665  
Chosen Option : 4

**Q.2** Select the correct mirror image of the given figure when the mirror is placed to the right side of the figure.



**Ans**

- 1.
- 2.
- 3.
- 4.

Question ID : 65497817670  
Chosen Option : 2

**Q.3** In a class of 42 students, Ritika ranks 13th from the top while Sheetal is 34th from the bottom. How many students are there between Ritika and Sheetal?

- Ans**
- 1. 2
  - 2. 1
  - 3. 4
  - 4. 3

Question ID : 65497817664  
Chosen Option : 3

Q.4 Select the option in which the number-pair shares the same relationship as that shared by the following number-pair.





84 : 96

- Ans  1. 46 : 60  
 2. 64 : 82  
 3. 42 : 58  
 4. 68 : 82

Question ID : 65497817650  
Chosen Option : --

Q.5 Select the option figure that will replace question mark (?) in the following figure series.



- Ans  1.   
 2.   
 3.   
 4. 

Question ID : 65497817667  
Chosen Option : 2

Q.6 Select the correct sequence of mathematical signs to replace the \* signs so as to balance the given equation.

$$42 * 36 * 5 * 78 * (8 * 5) = 216$$

- Ans  1. ÷ + × + -  
 2. + × - ÷ +  
 3. × + + - +  
 4. - + + × +

Question ID : 65497817649  
Chosen Option : 2

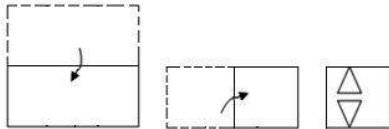
Q.7 Which number will replace the question mark (?) in the following number series?

8, 16, 12, 32, 16, 64, ?

- Ans
- 1. 18
  - 2. 32
  - 3. 24
  - 4. 20

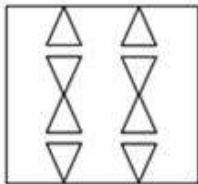
Question ID : 65497817653  
Chosen Option : 4

Q.8 A paper is folded and cut as shown in the following figures. How will it appear when unfolded?

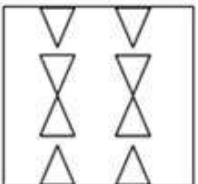


Ans

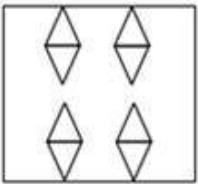
1.



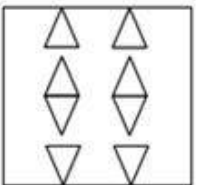
2.



3.



4.



Question ID : 65497817671  
Chosen Option : 1

Q.9 The way 'Dog' is related to 'Puppy', in the same way 'Sheep' is related to '\_\_\_\_\_'.

- Ans
- 1. Lamb
  - 2. Kid
  - 3. Calf
  - 4. Cub

Question ID : 65497817659  
Chosen Option : 2

**Q.10** Two statements are given, followed by two conclusions numbered I and II. Assuming the statements to be true, even if they seem to be at variance with commonly known facts, decide which of the conclusions logically follow(s) from the statements.

**Statements:**

Some mobile phones are video games.  
All video games are remote control.

**Conclusions:**

I. Some mobile phones are remote control.  
II. Some remote controls are mobile phones.

- Ans**
- 1. Only conclusion I follows.
  - 2. Neither conclusion I nor II follows.
  - 3. Both conclusions I and II follow.
  - 4. Only conclusion II follows.

Question ID : 65497817663  
Chosen Option : 3

**Q.11** Select the option word that is related to the third word in the same way as the second word is related to the first word.




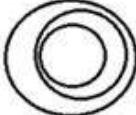
Watt : Power :: Volt : \_\_\_\_\_.

- Ans**
- 1. Current
  - 2. Potential
  - 3. Strength
  - 4. Ampere

Question ID : 65497817660  
Chosen Option : 1

**Q.12** Select the Venn diagram that best illustrates the relationship between the following classes:

Months, Calendar, Days

- Ans**
- 1. 
  - 2. 
  - 3. 
  - 4. 

Question ID : 65497817672  
Chosen Option : 4

Q.13 In a certain code language if HIMSELF is written as FKKUCND, then how will OUTDOOR be written in the same code language?

- Ans  1. PWSDNOR  
 2. MWRFMQP  
 3. MVTGORP  
 4. NWQFLQO

Question ID : 65497817655  
Chosen Option : 2

Q.14 Select the correct alternative to indicate the sequential order of the following rivers of India. (North to South)

1. Kaveri
2. Narmada
3. Godavari
4. Ganges
5. Krishna

- Ans  1. 1 - 3 - 2 - 5 - 4  
 2. 4 - 3 - 2 - 1 - 5  
 3. 2 - 3 - 4 - 1 - 5  
 4. 4 - 2 - 3 - 5 - 1

Question ID : 65497817666  
Chosen Option : 2

Q.15 Which two digits and signs can be interchanged so as to balance the given equation?

$$36 \div 2 - 159 + 78 \times 18 = 135$$

- Ans  1. 8 and 2;  $\times$  and  $+$   
 2. 5 and 8;  $+$  and  $-$   
 3. 8 and 7;  $\times$  and  $+$   
 4. 6 and 8;  $+$  and  $-$

Question ID : 65497817648  
Chosen Option : 1

Q.16 Which number will replace the question mark (?) in the following number series?

54, 68, 78, 84, ?

- Ans  1. 86  
 2. 88  
 3. 84  
 4. 90

Question ID : 65497817652  
Chosen Option : 1



Q.17 Which letter cluster will replace the question mark (?) in the following letter series?

RUY, DGK, PSW, ?

- Ans  1. ADG  
 2. ADH  
 3. BEI  
 4. BEH

Question ID : 65497817661  
Chosen Option : 3

Q.18 Select the option in which the numbers are related in the same way, as the numbers of the following set.

98 : 81 : 72

- Ans  1. 76 : 63 : 54  
 2. 68 : 56 : 46  
 3. 72 : 63 : 55  
 4. 68 : 54 : 44

Question ID : 65497817651  
Chosen Option : 1

Q.19 If in a coding system MUSICAL is coded as 109 and RAISING is coded as 110, then how will FOURTH be coded in the same coding system?

- Ans  1. 72  
 2. 74  
 3. 70  
 4. 76

Question ID : 65497817657  
Chosen Option : 2

Q.20 Select the option that is related to the third letter cluster in the same way as the second letter cluster is related to the first letter cluster.

RAILCAR : NEEPYEN : : ICESHOW : \_\_\_\_\_.

- Ans  1. MZJOMKU  
 2. MYIOLKT  
 3. EGAWDSS  
 4. NZJPMLU

Question ID : 65497817658  
Chosen Option : 3

Q.21 If in a coding system SHELTER is coded as 6295793 and FISHERY is coded as 8162934, then how will FILTHY be coded in the same coding system?

Ans  1. 815724

2. 812457

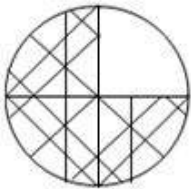
3. 157842

4. 581724

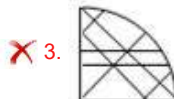
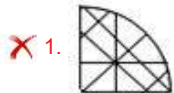
Question ID : 65497817656

Chosen Option : 1

Q.22 Identify the option figure that completes the following pattern.



Ans



Question ID : 65497817668

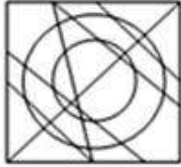
Chosen Option : 4

Q.23 Identify the option in which following figure is embedded (rotation is NOT applicable):

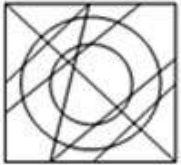


Ans

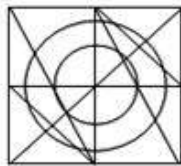
1.



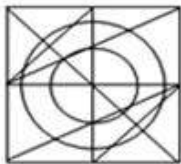
2.



3.



4.



Question ID : 65497817669  
Chosen Option : 3

Q.24 In a certain code language if CONDENSE is written as OCDNNEES, then how will FACILITY be written in the same code language?

Ans  1. AFYTICIL

2. YTILICAF

3. AFICILYT

4. ICAFYTIL

Question ID : 65497817654  
Chosen Option : 3

**Q.25** Two statements are given, followed by two conclusions numbered I and II. Assuming the statements to be true, even if they seem to be at variance with commonly known facts, decide which of the conclusions logically follow(s) from the statements.

**Statements:**

All heads are tails.  
All tails are bones.

**Conclusions:**

I. All bones are heads.  
II. All heads are bones.

- Ans**
- 1. Only conclusion I follows.
  - 2. Both conclusions I and II follow.
  - 3. Only conclusion II follows.
  - 4. Neither conclusion I nor II follows.

Question ID : 65497817662  
Chosen Option : 3

Section : Numerical Aptitude

**Q.1** What is the average of the sixty terms given below?

$\cos^2 x, \cos^2 2x, \cos^2 3x, \dots, \cos^2 30x, \sin^2 x, \sin^2 2x, \sin^2 3x, \dots, \sin^2 30x$

- Ans**
- 1.  $\cos^2 x$
  - 2. 0.5
  - 3. 1
  - 4.  $\cos^2 x \sin^2 x$

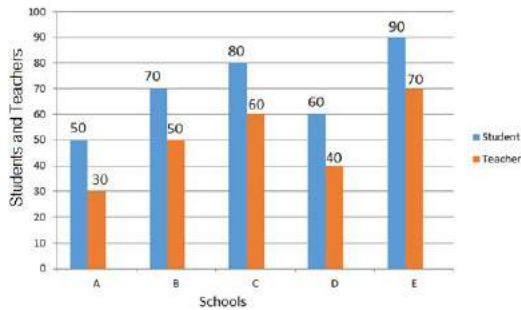
Question ID : 65497817475  
Chosen Option : 2

**Q.2** A wooden piece in the shape of a cuboid is divided into five equal parts by cutting it with four cuts perpendicular to its length, and it turns out that each piece is a cube of volume  $27 \text{ cm}^3$ . What is the total surface area (in  $\text{cm}^2$ ) of the cuboid?

- Ans**
- 1. 150
  - 2. 174
  - 3. 216
  - 4. 198

Question ID : 65497817488  
Chosen Option : 4

**Q.3** The number of teachers and students in five schools A, B, C, D and E in a city has been depicted through the given bar graph, where the number of students has been presented as multiples of ten. Study the bar graph and answer the question that follows.



What is the proportion of the student to teacher ratios across the five schools, A, D, B, C, E?

- Ans
- 1. 756 : 840 : 900 : 945 : 980
  - 2. 350 : 275 : 287 : 300 : 320
  - 3. 350 : 315 : 294 : 280 : 270
  - 4. 720 : 800 : 926 : 935 : 975

Question ID : 65497817494  
Chosen Option : 3

**Q.4** The difference between a positive number and its reciprocal increases by a factor of  $\frac{175}{144}$  when the number is made to increase by 20%. What is the number?

- Ans
- 1. 7.5
  - 2. 6
  - 3. 2.5
  - 4. 5

Question ID : 65497817478  
Chosen Option : --

**Q.5** The simple interest earned on a sum is  $\frac{1}{25}$  of the sum, where the number of years of investment is equal to the rate percentage. For how many years was the sum invested?

- Ans
- 1. 2
  - 2. 5
  - 3. 3
  - 4. 4

Question ID : 65497817485  
Chosen Option : 1

**Q.6** Four persons,  $P, Q, R, S$  were engaged for doing a task, with the condition that  $P, Q, R, S$  work, respectively, on (Mondays, Thursdays); (Tuesdays, Fridays); (Wednesdays, Saturdays); (Sundays). The task was began on a Monday, and got completed on the 15<sup>th</sup> day, which was also a Monday. If the efficiencies of  $P, Q, R, S$  in respect of doing this task were in the proportion  $1 : 2 : 3 : 4$ , then in how many days could  $R$  complete the task, working alone without break?

- Ans**
- 1. 13
  - 2. 10
  - 3. 11
  - 4. 12

Question ID : 65497817472  
Chosen Option : 2

**Q.7** How many numbers between 500 and 900, both inclusive, are exactly divisible by all the numbers, 12, 15, 20 and 30?

- Ans**
- 1. 4
  - 2. 5
  - 3. 7
  - 4. 6

Question ID : 65497817490  
Chosen Option : 3

**Q.8** If 24 men can do a work in 15 days by working 12 hours daily, then in how many days will 36 men be able to do double the quantum of work, by working 10 hours daily?

- Ans**
- 1. 30
  - 2. 32
  - 3. 24
  - 4. 12

Question ID : 65497817471  
Chosen Option : 3

**Q.9** The material of a sphere of radius  $r$  is melted and recast into a hollow cylindrical shell of thickness  $a$  and outer radius  $b$ . What is its length assuming that no material is lost in recasting?

- Ans**
- 1.  $\frac{4r^3}{3a(2a-b)}$
  - 2.  $\frac{4r^3}{3a(b+a)(b-a)}$
  - 3.  $\frac{4r^3}{3a(b-a)}$
  - 4.  $\frac{4r^3}{3a(2b-a)}$

Question ID : 65497817489  
Chosen Option : 3

**Q.10** A lady walks to her office every day from home and maintains a fixed time for the same. On one day she decreases her speed by 25%. By what fraction of her usual time will she be late on that day?

- Ans**
- 1.  $\frac{2}{3}$
  - 2.  $\frac{1}{4}$
  - 3.  $\frac{1}{3}$
  - 4.  $\frac{1}{6}$

Question ID : 65497817473  
Chosen Option : 3

**Q.11** Two similar pieces of an item were purchased by paying the same amount for each, and they were sold, respectively, for a profit of 25% and a loss of 20%. What was his profit percentage?

- Ans**
- 1. 2
  - 2. 4.5
  - 3. 2.5
  - 4. 5

Question ID : 65497817480  
Chosen Option : 3

**Q.12** If  $\frac{a}{b} = \frac{b}{c} = \frac{c}{d}$ , then  $\frac{a}{d}$  in terms of  $b$  and  $c$  is equal to:

- Ans**
- 1.  $\left(\frac{b}{c}\right)^3$
  - 2.  $\left(\frac{b}{c}\right)^2$
  - 3.  $\left(\frac{b}{c}\right)^{1.5}$
  - 4.  $\left(\frac{b}{c}\right)^{0.5}$

Question ID : 65497817481  
Chosen Option : 1

**Q.13** In what ratio should two varieties of tea at ₹300 and ₹400 per kg, respectively, be mixed so that the mixture is worth ₹320 per kg?

- Ans**
- 1. 1 : 5
  - 2. 1 : 4
  - 3. 5 : 1
  - 4. 4 : 1

Question ID : 65497817482  
Chosen Option : 4

Q.14

Simplify  $\frac{10^2 \text{ of } \left(\frac{1}{5}\right)^3 \div \frac{1}{4} \times 4 - \frac{2}{5} \text{ of } 15}{\frac{4}{5} \left(5 \div 5 \text{ of } 12 + \frac{1}{6}\right)}$

Ans

1.  $-\frac{65}{73}$

2. 34

3.  $-\frac{147}{73}$

4.  $-\frac{78}{73}$

Question ID : 65497817997  
Chosen Option : 2

Q.15 If a person sells 80% of the number of toys for an amount with which he purchased all the toys, then what is his profit percentage?

Ans  1. 20

2. 22.5

3. 25

4. 40

Question ID : 65497817479  
Chosen Option : 3

Q.16 X, Y, Z enter into a partnership venture with a capital of ₹1,20,000, in which the contribution of Y and Z are, respectively, 40% more and ₹1,000 more than that of X. The profit earned is 20% of the capital. Out of this profit, 10% goes towards some incidental expenses. What is the share (in ₹) of X out of it?

Ans  1. 7,500

2. 4,800

3. 7,000

4. 6,300

Question ID : 65497817483  
Chosen Option : 4

Q.17 The line graph that can replace a histogram is called a/an:

Ans  1. frequency polygon

2. ogive

3. cumulative frequency less than type graph

4. cumulative frequency more than type graph

Question ID : 65497817486  
Chosen Option : --



**Q.18** A certain sum was invested for three years in a scheme in which the interest gets compounded annually. During the first two years, the scheme provided growths at the rates of 80% and 60%, respectively, but during the third year there was a decline by 40%. What was the overall interest rate for three years?

- Ans**
- 1. 24%
  - 2. 20%
  - 3. 22.5%
  - 4. 48.6%

Question ID : 65497817484  
Chosen Option : 2

**Q.19** Two circles touch each other externally; the distance between their centres is 12 cm and the sum of their areas (in  $\text{cm}^2$ ) is  $74\pi$ . What is the radius of the smaller circle?

- Ans**
- 1. 2.8
  - 2. 4.5
  - 3. 5
  - 4. 3

Question ID : 65497817487  
Chosen Option : 3

**Q.20** The average daily expenditure of a person during the month of February 2020 was ₹120. The average expenditure for the first 15 days was ₹142, and for the last 15 days was ₹96. What was his expenditure (in ₹) on 15<sup>th</sup> February?

- Ans**
- 1. 90
  - 2. 98
  - 3. 95
  - 4. 88

Question ID : 65497817476  
Chosen Option : 1

**Q.21** An article was subject to three successive discounts, whereby a customer had to pay ₹2,366.8 less than the marked price of ₹12,500. If the rates of the first two discounts were, respectively, 12% and 6%, then what was the rate percentage of the third discount?

- Ans**
- 1. 3.6
  - 2. 2
  - 3. 2.5
  - 4. 3

Question ID : 65497817477  
Chosen Option : 2

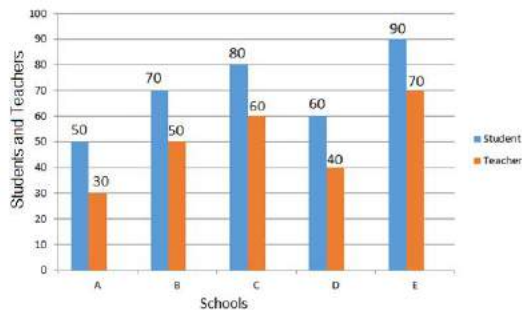
Q.22

The value of  $\left(120 + \frac{5}{4}\right) - \left\{ \left(105 - 5 \times 3 + 2 \text{ of } 17 \div \frac{1}{6}\right) \div \left(5 + \frac{1}{4}\right) \right\}$  is:

- Ans
- 1. 46
  - 2. 50
  - 3. 45
  - 4. 40

Question ID : 65497815875  
Chosen Option : 4

Q.23 The number of teachers and students in five schools A, B, C, D and E in a city has been depicted through the given bar graph, where the number of students has been presented as multiples of ten. Study the bar graph and answer the question that follows.

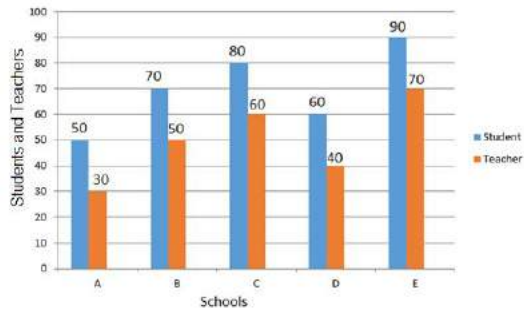


If 20% of the students of E get transferred such that they get equally distributed among A and C, and 10% of their teachers are transferred to A, then which among the following schools will have its student to teacher ratio closest to that of D?

- Ans
- 1. A
  - 2. C
  - 3. B
  - 4. E

Question ID : 65497817495  
Chosen Option : 2

**Q.24** The number of teachers and students in five schools A, B, C, D and E in a city has been depicted through the given bar graph, where the number of students has been presented as multiples of ten. Study the bar graph and answer the question that follows.



Which school among the following has the highest teacher to student ratio?

- Ans
- 1. B
  - 2. E
  - 3. C
  - 4. D

Question ID : 65497817493  
Chosen Option : 2

**Q.25** Two clocks were synchronised at 11 a.m. on a Sunday. Thereafter, every day they were, respectively, found to gain and lose one minute per day. What time, expressed in hours and minutes, will the second clock show when the first clock shows 10 p.m. on the next Friday?

- Ans
- 1. 9 hours  $48\frac{3}{11}$  minutes p.m.
  - 2. 9 hours  $48\frac{7}{11}$  minutes p.m.
  - 3. 9 hours  $49\frac{1}{11}$  minutes p.m.
  - 4. 9 hours  $49\frac{9}{11}$  minutes p.m.

Question ID : 65497817474  
Chosen Option : 1

Section : General Awareness

**Q.1** What is the unit to measure the wavelength of light?

- Ans
- 1. Faraday
  - 2. Candela
  - 3. Dyne
  - 4. Angstrom

Question ID : 65497814279  
Chosen Option : 2

**Q.2 Who invented the capillary feed fountainpen?**

- Ans  1. David Hughes  
 2. Ian Donald  
 3. LE Waterman  
 4. Alfred Nobel

Question ID : 65497814280  
Chosen Option : 3

**Q.3 Which of the following is the world's largest delta?**

- Ans  1. Irrawaddy Delta  
 2. Rhine-Meuse Delta  
 3. Ganges–Brahmaputra Delta  
 4. Amazon Delta

Question ID : 65497814284  
Chosen Option : 3

**Q.4 Who wrote the book 'Kundalini: The Mother of the Universe', which includes an English translation of 'Lalita Sahasranama'?**

- Ans  1. Rishi Singh Gherwal  
 2. Rabindranath Tagore  
 3. Vikram Seth  
 4. Dr. S Radha Krishnan

Question ID : 65497814271  
Chosen Option : 4

**Q.5 Which part of the Constitution of India deals with the relation between the Union and the States?**

- Ans  1. Part VIII  
 2. Part XI  
 3. Part VII  
 4. Part IX

Question ID : 65497814275  
Chosen Option : 4

**Q.6 The Planning Commission was established by an executive decision of Government of India in \_\_\_\_\_.**

- Ans  1. 1955  
 2. 1945  
 3. 1960  
 4. 1950

Question ID : 65497814272  
Chosen Option : 4

**Q.7 Who is the author of the book 'Beyond the Lines'?**

- Ans  1. Vishnu Sharma  
 2. Omar Khayyam  
 3. Kuldip Nayar  
 4. VV Giri

Question ID : 65497814269

Chosen Option : --

**Q.8 Filmmaker Utpal Borpujari's documentary, 'Songs of the \_\_\_\_\_' is based on the folk songs and culture of the Naga tribes.**

- Ans  1. Blue River  
 2. Blue Sky  
 3. Blue Earth  
 4. Blue Hills

Question ID : 65497814270

Chosen Option : --

**Q.9 In the context of Economics, what does P stand for in EPF?**

- Ans  1. Planning  
 2. Profit  
 3. Promotion  
 4. Provident

Question ID : 65497814274

Chosen Option : --

**Q.10 The La Liga Trophy is associated with which sport?**

- Ans  1. Tennis  
 2. Football  
 3. Weightlifting  
 4. Cricket

Question ID : 65497814268

Chosen Option : 2

**Q.11 Rauf and Hikar are the dance forms of \_\_\_\_\_.**

- Ans  1. Odisha  
 2. Jammu and Kashmir  
 3. Manipur  
 4. Sikkim

Question ID : 65497814266

Chosen Option : 2

**Q.12 Which dynasty ruled India between 320 AD and 550 AD?**

- Ans
- 1. Mauryan Dynasty
  - 2. Hoysala Dynasty
  - 3. Magadha Dynasty
  - 4. Gupta Dynasty

Question ID : 65497814287  
Chosen Option : 3

**Q.13 'Pandavani' is the most celebrated folklore of \_\_\_\_\_.**

- Ans
- 1. Maharashtra
  - 2. Chhattisgarh
  - 3. Rajasthan
  - 4. Karnataka

Question ID : 65497814264  
Chosen Option : --

**Q.14 The 'Procedure for Amendment of the Constitution' in the Indian Constitution is borrowed from which of the following country's constitutions?**

- Ans
- 1. Russia
  - 2. Germany
  - 3. South Africa
  - 4. Canada

Question ID : 65497814277  
Chosen Option : 4

**Q.15 When was the first battle of Panipat fought?**

- Ans
- 1. 1479
  - 2. 1326
  - 3. 1526
  - 4. 1632

Question ID : 65497814288  
Chosen Option : 3

**Q.16 Which instrument is used to measure very high temperature?**

- Ans
- 1. Fathometer
  - 2. Manometer
  - 3. Salinometer
  - 4. Pyrometer

Question ID : 65497814278  
Chosen Option : 4

**Q.17 Which of the following is a Kharif crop in north and Rabi crop in south India?**

- Ans  1. Ragi  
 2. Sesamum  
 3. Sunflower  
 4. Sugarcane

Question ID : 65497814283  
Chosen Option : 2

**Q.18 Which of the following Vedas dealt with music?**

- Ans  1. Sama Veda  
 2. Rig Veda  
 3. Yajur Veda  
 4. Atharva Veda

Question ID : 65497814286  
Chosen Option : 1

**Q.19 Vitamin K deficiency in our body leads to:**

- Ans  1. delayed clotting of blood  
 2. interference with reproduction  
 3. night-blindness  
 4. scurvy

Question ID : 65497814281  
Chosen Option : 1

**Q.20 Infant Mortality Rate (or IMR) indicates the number of children that die before the age of \_\_\_\_\_ as a proportion of 1000 live children born in that particular year.**

- Ans  1. 6 months  
 2. 3 months  
 3. 1 year  
 4. 3 years

Question ID : 65497816394  
Chosen Option : --

**Q.21 'Kolkali' is one of the traditional folk dances of which state?**

- Ans  1. Andhra Pradesh  
 2. Nagaland  
 3. Kerala  
 4. Arunachal Pradesh

Question ID : 65497814265  
Chosen Option : 4

**Q.22 Who discovered the smallpox vaccine?**

- Ans  1. Jonas Salk  
 2. Louis Pasteur  
 3. Edward Jenner  
 4. Leon Calmette

Question ID : 65497814282  
Chosen Option : 2

**Q.23 Anju Bobby George is associated with which of the following sports?**

- Ans  1. Boxing  
 2. Athletics  
 3. Shooting  
 4. Hockey

Question ID : 65497814267  
Chosen Option : 3

**Q.24 What does Article 21 of the Indian Constitution deal with?**

- Ans  1. Right to property  
 2. Fundamental duties  
 3. Right to life  
 4. National emergency

Question ID : 65497814276  
Chosen Option : 3

**Q.25 Which soils are widespread in the northern plains and the river valleys and cover about 40% of the total area of India?**

- Ans  1. Black soil  
 2. Laterite soil  
 3. Red soil  
 4. Alluvial soil

Question ID : 65497814285  
Chosen Option : 4



# Multi Tasking Non Technical Staff Examination 2020

Participant ID	
Participant Name	
Test Center Name	Informatic Computer Education. Patliputra
Test Date	12/10/2021
Test Time :	4:00 PM - 5:30 PM
Subject	MTS Non Technical 2020

Section : **General English**

**Q.1 Select the most appropriate word to fill in the blank.**

The \_\_\_\_\_ to have multiple plasma banks is a praise-worthy one.

- Ans
- 1. inaction
  - 2. initiation
  - 3. initiate
  - 4. initiative

Question ID : **65497818434**  
Chosen Option : 4

**Q.2 Select the most appropriate word to fill in the blank.**

The Singapore government has deported ten Indian students for \_\_\_\_\_ the government rules.

- Ans
- 1. vandalising
  - 2. aiding
  - 3. verifying
  - 4. violating

Question ID : **65497818454**  
Chosen Option : 4

**Q.3 Select the most appropriate option to substitute the underlined segment in the given sentence. If there is no need to substitute it, select 'No substitution required'.**

There was enough evidence to convict him of selling adulterated food.

- Ans
- 1. convict him in
  - 2. convict him into
  - 3. No substitution required
  - 4. convict him by

Question ID : **65497816321**  
Chosen Option : 1

Q.4 Select the most appropriate synonym of the given word.

**SYMPTOMATIC**

- Ans  1. Optimistic  
 2. Characteristic  
 3. Strange  
 4. Atypical

Question ID : 65497818446  
Chosen Option : 4

Q.5 Select the word which means the same as the group of words given.

A large open area of land, water or sky

- Ans  1. Front  
 2. Margin  
 3. Enclosure  
 4. Expanse

Question ID : 65497818450  
Chosen Option : 1

Q.6 Select the most appropriate ANTONYM of the given word.

**OBESE**

- Ans  1. Skinny  
 2. Rude  
 3. Paunchy  
 4. Cute

Question ID : 65497818445  
Chosen Option : 1

Q.7 Select the most appropriate option to substitute the underlined segment in the given sentence. If there is no need to substitute it, select 'No substitution required'.

The police warned citizens to be alert when outdoors as gangs has been attacking people on the road.

- Ans  1. No substitution required  
 2. was attacking  
 3. have been attacking  
 4. was being attacked

Question ID : 65497818443  
Chosen Option : 2

**Q.8 Select the INCORRECTLY spelt word.**

- Ans  1. Iodine  
 2. Voilent  
 3. Enjoin  
 4. Loiter

Question ID : 65497818453  
Chosen Option : 2

**Q.9 Select the most appropriate meaning of the given idiom.**

**Get on like a house on fire**

- Ans  1. To be angry and unfriendly  
 2. To become friends quickly  
 3. To end a relationship  
 4. To take an instant dislike

Question ID : 65497818448  
Chosen Option : 1

**Q.10 Select the most appropriate ANTONYM of the given word.**

**STUNNING**

- Ans  1. Impulsive  
 2. Obedient  
 3. Unattractive  
 4. Gorgeous

Question ID : 65497818444  
Chosen Option : 3

**Q.11 Identify the segment in the sentence which contains a grammatical error.**

**Tejaswin, the Indian sportsman, is leading the anti-race cause in the US.**

- Ans  1. Tejaswin, the Indian sportsman  
 2. the anti-race cause  
 3. in the US  
 4. is leading

Question ID : 65497818431  
Chosen Option : 1

**Q.12** Select the word which means the same as the group of words given.

Using high-sounding words but with little meaning

- Ans  1. Bombastic  
 2. Eloquent  
 3. Clever  
 4. Reserved

Question ID : 65497818451  
Chosen Option : 1

**Q.13** Select the most appropriate option to substitute the underlined segment in the given sentence. If there is no need to substitute it, select 'No substitution required'.

Can you assembly the television using the manual?

- Ans  1. assembling  
 2. No substitution required  
 3. assembles  
 4. assemble

Question ID : 65497818441  
Chosen Option : 4

**Q.14** Select the most appropriate synonym of the given word.

**RABID**

- Ans  1. Calm  
 2. Extreme  
 3. Methodical  
 4. Indifferent

Question ID : 65497818447  
Chosen Option : --

**Q.15** Select the **INCORRECTLY** spelt word.

- Ans  1. Grieve  
 2. Concieve  
 3. Deceive  
 4. Receive

Question ID : 65497818452  
Chosen Option : 4

**Q.16 Select the most appropriate word to fill in the blank.**

Several foreign students have been asked by the US to leave the university campus and \_\_\_\_\_ home.

- Ans
- 1. returned
  - 2. returning
  - 3. return
  - 4. returns

Question ID : 65497818433  
Chosen Option : 3

**Q.17 Select the most appropriate word to fill in the blank.**

The CBSE has decided on a \_\_\_\_\_ to assign marks for the examinations not taken by Class 12 students.

- Ans
- 1. formulae
  - 2. equation
  - 3. formula
  - 4. formation

Question ID : 65497818455  
Chosen Option : 3

**Q.18 Select the most appropriate meaning of the given idiom.**

Have your heart set on something

- Ans
- 1. To not want something at all
  - 2. To want something very much
  - 3. To be always in a nervous state
  - 4. To be in control of one's feelings

Question ID : 65497818449  
Chosen Option : 2

**Q.19 Identify the segment in the sentence which contains a grammatical error.**

Google has set on an India fund and announced an investment of ten billion dollars.

- Ans
- 1. and announced an investment
  - 2. Google has set on
  - 3. of ten billion dollars
  - 4. an India fund

Question ID : 65497818430  
Chosen Option : 4

**Q.20 Identify the segment in the sentence which contains a grammatical error.**

Sitab, my gardener, have been cut the hedge the whole morning.

- Ans  1. have been cut  
 2. Sitab, my gardener  
 3. the hedge  
 4. the whole morning

Question ID : 65497818432  
Chosen Option : 1

**Comprehension:**

In the following passage, some words have been deleted. Fill in the blanks with the help of the alternatives given. Select the most appropriate option for each blank.

The first thousand days can determine the trajectory (1)\_\_\_\_\_ a child's life. After food for the body (2)\_\_\_\_\_ taken care of we should provide food for (3)\_\_\_\_\_ mind. Early stimulation of children's mind can (4)\_\_\_\_\_ them to become good learners. Parents should be (5)\_\_\_\_\_ in doing this.

**SubQuestion No : 21**

**Q.21 Select the most appropriate option to fill in blank no. 1.**

- Ans  1. from  
 2. at  
 3. of  
 4. about

Question ID : 65497818436  
Chosen Option : 3

**Comprehension:**

In the following passage, some words have been deleted. Fill in the blanks with the help of the alternatives given. Select the most appropriate option for each blank.

The first thousand days can determine the trajectory (1)\_\_\_\_\_ a child's life. After food for the body (2)\_\_\_\_\_ taken care of we should provide food for (3)\_\_\_\_\_ mind. Early stimulation of children's mind can (4)\_\_\_\_\_ them to become good learners. Parents should be (5)\_\_\_\_\_ in doing this.

**SubQuestion No : 22**

**Q.22 Select the most appropriate option to fill in blank no. 2.**

- Ans  1. am  
 2. are  
 3. has  
 4. is

Question ID : 65497818437  
Chosen Option : 2

**Comprehension:**

In the following passage, some words have been deleted. Fill in the blanks with the help of the alternatives given. Select the most appropriate option for each blank.

The first thousand days can determine the trajectory (1)\_\_\_\_\_ a child's life. After food for the body (2)\_\_\_\_\_ taken care of we should provide food for (3)\_\_\_\_\_ mind. Early stimulation of children's mind can (4)\_\_\_\_\_ them to become good learners. Parents should be (5)\_\_\_\_\_ in doing this.

**SubQuestion No : 23**

**Q.23** Select the most appropriate option to fill in blank no. 3.

- Ans  1. a  
 2. the  
 3. some  
 4. that

Question ID : 65497818438  
Chosen Option : 2

**Comprehension:**

In the following passage, some words have been deleted. Fill in the blanks with the help of the alternatives given. Select the most appropriate option for each blank.

The first thousand days can determine the trajectory (1)\_\_\_\_\_ a child's life. After food for the body (2)\_\_\_\_\_ taken care of we should provide food for (3)\_\_\_\_\_ mind. Early stimulation of children's mind can (4)\_\_\_\_\_ them to become good learners. Parents should be (5)\_\_\_\_\_ in doing this.

**SubQuestion No : 24**

**Q.24** Select the most appropriate option to fill in blank no. 4.

- Ans  1. led  
 2. lead  
 3. leads  
 4. leading

Question ID : 65497818439  
Chosen Option : 2

**Comprehension:**

In the following passage, some words have been deleted. Fill in the blanks with the help of the alternatives given. Select the most appropriate option for each blank.

The first thousand days can determine the trajectory (1)\_\_\_\_\_ a child's life. After food for the body (2)\_\_\_\_\_ taken care of we should provide food for (3)\_\_\_\_\_ mind. Early stimulation of children's mind can (4)\_\_\_\_\_ them to become good learners. Parents should be (5)\_\_\_\_\_ in doing this.

**SubQuestion No : 25**

**Q.25** Select the most appropriate option to fill in blank no. 5.

- Ans  1. adjusted  
 2. restricted  
 3. allocated  
 4. orientated

Question ID : 65497818440  
Chosen Option : 4

**Q.1** Two statements are followed by two conclusions numbered I and II. Assuming the statements to be true even if they do not conform to real-world knowledge, decide which of the conclusions logically follows/follow from the statements.

**Statements:**

1. Some phones are instruments.
2. All instruments are devices.

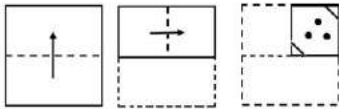
**Conclusions:**

- I. All devices are instruments.
- II. Some devices are phones.

- Ans**
- 1. Only conclusion I follows.
  - 2. Only conclusion II follows.
  - 3. Both conclusions I and II follow.
  - 4. Neither conclusion I nor conclusion II follows.

Question ID : 65497818066  
Chosen Option : 2

**Q.2** The sequence of folding a piece of paper and the manner in which the folded paper has been cut is shown in the figures below. How would the paper look when unfolded?



**Ans**

- 1.
- 2.
- 3.
- 4.

Question ID : 65497818075  
Chosen Option : 3



**Q.3** If MATERIAL is coded as SZLREKZH, then how would EQUATION be coded?

- Ans
- 1. TPATDMNH
  - 2. PDTAMTNH
  - 3. TPDTAMNH
  - 4. SRFTAOPJ

Question ID : 65497818059

Chosen Option : 3

**Q.4** Eight houses A, B, C, D, E, F, G and H are in two rows with four houses in each row.  
The houses in one row face the houses in the other.

- i. C is facing F.
- ii. G and A are diagonally opposite.
- iii. E is facing H, but is not in the same row as that of A.
- iv. H is between D and C.

Which house is B facing?

- Ans
- 1. D
  - 2. G
  - 3. F
  - 4. A

Question ID : 65497818069

Chosen Option : 4


**Q.5** If VEAL is coded as 4483 and LOWER is coded as 33549, then how would TECHNO be coded?

- Ans
- 1. 253911
  - 2. 205393
  - 3. 756946
  - 4. 243853

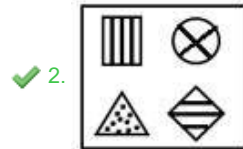
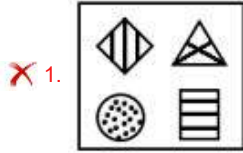
Question ID : 65497818061

Chosen Option : 4

Q.6 Which option figure would come next in the following figure series?



Ans



Question ID : 65497818071  
Chosen Option : 2

Q.7 Choose the set of numbers that is similar to the following set.

{25, 19, 36}

Ans ✗ 1. {9, 49, 16}

✓ 2. {20, 28, 32}

✗ 3. {30, 25, 35}

✗ 4. {36, 23, 48}

Question ID : 65497818055  
Chosen Option : --

**Q.8** Seven persons visited a doctor for consultation, one after another.

- i. Mahesh visited immediately after Amit but sometime before Virat.
- ii. Ashok visited just after Virat and just before Naman.
- iii. Neither Anup nor Naman was the last to visit.
- iv. There were as many visitors between Ashok and Suraj as there were between Anup and Ashok.

Who were the first and the last persons to have visited the doctor, respectively?

- Ans
- 1. Mahesh and Suraj
  - 2. Naman and Ashok
  - 3. Amit and Ashok
  - 4. Amit and Suraj

Question ID : 65497818070  
Chosen Option : --

**Q.9** Which letter-cluster will replace the question mark (?) in the following series?

QUESTION, USINETO, SNTIEO, NIOTE, ?

- Ans
- 1. ITEO
  - 2. TEOI
  - 3. ITOE
  - 4. OEIT

Question ID : 65497818065  
Chosen Option : 3

**Q.10** Three statements are followed by three conclusions numbered I, II and III. Assuming the statements to be true even if they do not conform to real-world knowledge, decide which of the conclusions logically follows/follow from the statements.

**Statements:**

- 1. All watches are clocks.
- 2. Some clocks are machines.
- 3. Some machines are gadgets.

**Conclusions:**

- I. Some watches are machines.
- II. Some machines are clocks.
- III. Some gadgets being clocks is a possibility.

- Ans
- 1. Only conclusion II follows .
  - 2. All conclusions I, II and III follow.
  - 3. Only conclusion III follows.
  - 4. Only conclusions II and III follow.

Question ID : 65497818067  
Chosen Option : 4

Q.11 Six friends A, B, C, D, E and F are standing in a line facing North.

- i. There is one person between A and F.
- ii. B and E have two persons between them.
- iii. C is on the extreme left.
- iv. F is between B and D.

If E is NOT at an extreme end, who is on the extreme right?

- Ans
- 1. D
  - 2. A
  - 3. B
  - 4. F

Question ID : 65497818068  
Chosen Option : 1

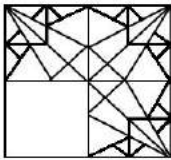
Q.12 Select the option in which the number-pair shares the same relationship as that shared by the following number-pair.

61 : 97

- Ans
- 1. 79 : 119
  - 2. 118 : 141
  - 3. 46 : 78
  - 4. 52 : 84

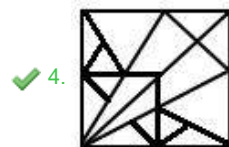
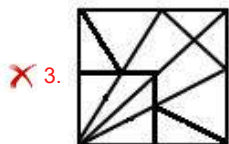
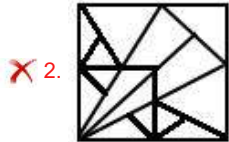
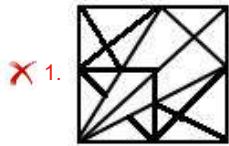
Question ID : 65497818054  
Chosen Option : --

Q.13 Select the option figure, which when placed in the blank space of the figure marked 'X' would complete the pattern.



(X)

Ans



Question ID : 65497818072  
Chosen Option : 4

Q.14 Which number will replace the question mark (?) in the following number series?

13, 16, 23, 36, 57, 88, ?, 188

Ans  1. 145

2. 119

3. 131

4. 127

Question ID : 65497818057  
Chosen Option : 3

Q.15 Select the option that is related to the third letter-cluster in the same way as the second letter-cluster is related to the first letter-cluster.

FJNRVZ : KLEWXQ : WTQNKH : ?

Ans  1. VTNMME

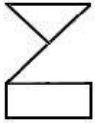
2. NVVEMM

3. USMENM

4. XRTMNE

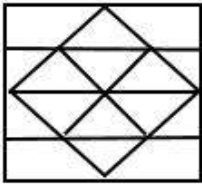
Question ID : 65497818062  
Chosen Option : 2

Q.16 Select the option in which the given figure is embedded (rotation is NOT allowed).

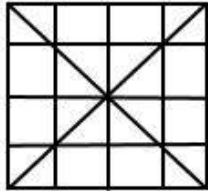


Ans

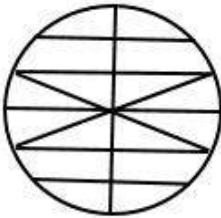
✗ 1.



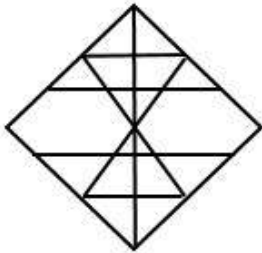
✓ 2.



✗ 3.



✗ 4.



Question ID : 65497818073  
Chosen Option : 2

Q.17 Select the option that is related to the third word in the same way as the second word is related to the first word.

Germany : Euro :: Myanmar : ?

- Ans
- ✗ 1. Dollar
  - ✓ 2. Kyat
  - ✗ 3. Dinar
  - ✗ 4. Pound

Question ID : 65497818064  
Chosen Option : 2

Q.18 Which number will replace the question mark (?) in the following number series?

17, 20, 30, 45, 71, 106, ?

- Ans
- 1. 143
  - 2. 171
  - 3. 167
  - 4. 156

Question ID : 65497818056  
Chosen Option : 4

Q.19 If DEAF is coded as 123 and CAN is coded as 45, then how would BEAK be coded?

- Ans
- 1. 126
  - 2. 109
  - 3. 93
  - 4. 113

Question ID : 65497818060  
Chosen Option : --

Q.20 If the signs + and ÷ are interchanged, then which of the following equations would be correct?

- Ans
- 1.  $8 + 12 \times 3 \div 1 = 4$
  - 2.  $15 - 12 + 6 \div 2 = 13$
  - 3.  $9 + 6 \times 4 \div 2 = 8$
  - 4.  $4 \div 8 + 12 \times 6 = 10$

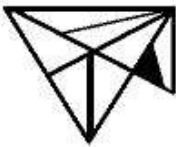
Question ID : 65497818052  
Chosen Option : 3

**Q.21** Select the mirror image of the figure marked 'X', when the mirror is placed on the right side of the figure.

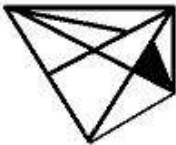


**Ans**

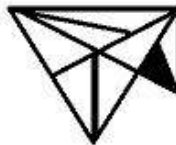
1.



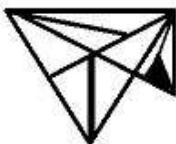
2.



3.



4.



Question ID : 65497818074

Chosen Option : 3

**Q.22** If HARBOUR is coded as BORUARH, then how would RAPTURE be coded?

**Ans**  1. TPURARE

2. PTAURRE

3. TUPARER

4. TUPRAER

Question ID : 65497818058

Chosen Option : 4

**Q.23** Select the option that is related to the third term in the same way as the second term is related to the first term.

Sour : Sweet :: Wild : ?

**Ans**  1. Forest

2. Lame

3. Tame

4. Salty

Question ID : 65497818063


Chosen Option : 3



Q.24 Select the Venn diagram that best illustrates the relationship between the following classes.

Troposphere, Atmosphere, Mesosphere

Ans



Question ID : 65497818076  
Chosen Option : 1

Q.25 Which two signs should be interchanged to make the given equation correct?

$$15 + 15 \div 15 - 15 \times 15 = 15$$

Ans ✓ 1. + and ×

✗ 2. ÷ and +

✗ 3. + and -

✗ 4. ÷ and ×

Question ID : 65497818053  
Chosen Option : 1

Section : Numerical Aptitude

Q.1 A man ordered 10 physics books and some chemistry books. The price of a chemistry book is twice the price of a Physics book. While preparing the bill, the clerk interchanged the number of physics and chemistry books by mistake,

which decreased the bill by  $12\frac{1}{2}\%$ . The ratio of the number of physics books to the number of chemistry books in the original order is:

Ans ✗ 1. 3 : 5

✗ 2. 3 : 4

✗ 3. 4 : 5

✓ 4. 2 : 3

Question ID : 65497815766  
Chosen Option : --

**Q.2** The average of seven consecutive even natural numbers is 36. The value of the first number is:

- Ans**
- 1. 26
  - 2. 30
  - 3. 32
  - 4. 28

Question ID : 65497815758

Chosen Option : 2

**Q.3** An aeroplane covers a certain distance at a speed of 320 km/h in  $5\frac{1}{2}$  hours. To cover the same distance in 4 hours, it must travel at a speed of:

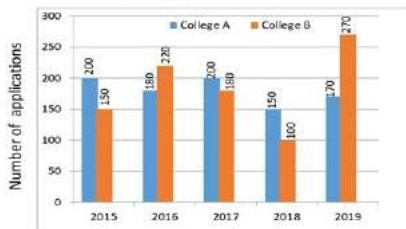
- Ans**
- 1. 460 km/h
  - 2. 440 km/h
  - 3. 420 km/h
  - 4. 450 km/h

Question ID : 65497815756

Chosen Option : 2

**Q.4** Study the following bar graph and answer the question given below.

The given bar graph represents the total number of applications received for the B.Com course by two different colleges A and B in five different years.



The number of applications received by college A in 2016 is what percentage of the total number of applications received by college A from 2015 to 2019?

- Ans**
- 1. 20%
  - 2. 15%
  - 3. 25%
  - 4. 24%

Question ID : 65497815777

Chosen Option : 1

**Q.5** The area of the four walls of a room is  $1152\text{ m}^2$  and its length is  $\frac{5}{3}$  times its breadth. If the height of the room is 12 m, then the area of its floor is:

- Ans**
- 1.  $580\text{m}^2$
  - 2.  $520\text{m}^2$
  - 3.  $540\text{m}^2$
  - 4.  $560\text{m}^2$

Question ID : 65497815772

Chosen Option : 3

**Q.6** A person has left a sum of Rs.1,45,600 to be divided among his two sons aged 15 years and 13 years now. Both of them invested their shares on simple interest at 10% per annum. If both of them gets equal amounts when they attain 18 years of age, then the original share received by younger son is:

- Ans
- 1. ₹64,500
  - 2. ₹67,600
  - 3. ₹66,400
  - 4. ₹67,500

Question ID : 65497815768  
Chosen Option : 2

**Q.7** If ₹12,500 is invested at 12% p.a. on compound interest for one year and 4 months, compounded annually, then the amount received is:

- Ans
- 1. ₹14,650
  - 2. ₹14,560
  - 3. ₹15,460
  - 4. ₹16,450

Question ID : 65497815767  
Chosen Option : 2

**Q.8** Three numbers are in the ratio  $\frac{1}{4} : \frac{1}{5} : \frac{1}{3}$ . The difference between the greatest and the smallest number is 800. The sum of the three numbers is:

- Ans
- 1. 4500
  - 2. 5800
  - 3. 5700
  - 4. 4700

Question ID : 65497815764  
Chosen Option : 4

**Q.9** The ratio of the monthly income and expenditure of Dinesh is 17 : 14, and his monthly savings are ₹12,000. If his monthly income is increased by ₹10,000 and expenditure is decreased by ₹2,000, then the new ratio of his income and expenditure is:

- Ans
- 1. 13 : 8
  - 2. 13 : 9
  - 3. 11 : 9
  - 4. 11 : 7

Question ID : 65497815765  
Chosen Option : 2

**Q.10** 'A' alone can complete a piece of work for ₹4,800 in 16 days, but by engaging an assistant, the work is completed in 12 days. Find the share to be received by the assistant.

- Ans**
- 1. ₹1,500
  - 2. ₹1,300
  - 3. ₹1,400
  - 4. ₹1,200

Question ID : 65497815754  
Chosen Option : 4

**Q.11** A man sold a radio and a TV set together for ₹30,400, thereby making a profit of 25% on the radio and 10% on the TV set. By selling them together for ₹30,700, he would have made a 10% profit on the radio and 25% on the TV set. The cost price of the radio is:

- Ans**
- 1. ₹10,000
  - 2. ₹12,000
  - 3. ₹8,000
  - 4. ₹9,000

Question ID : 65497815763  
Chosen Option : --

**Q.12** 55% of the candidates in an examination were boys. 60% of the boys and 75% of the girls passed, and 315 girls failed. The number of boys who failed were:

- Ans**
- 1. 626
  - 2. 632
  - 3. 616
  - 4. 646

Question ID : 65497815761  
Chosen Option : 3

**Q.13** The numbers 25, 34, 46, 48,  $2x+1$ ,  $4x+3$ , 105, 110, 114, 122 are written in ascending order and their median is 77. The value of  $x$  is:

- Ans**
- 1. 22
  - 2. 24
  - 3. 28
  - 4. 25

Question ID : 65497815769  
Chosen Option : 4

**Q.14** Two workers A and B are engaged to do a piece of work. A working alone would take 14 hours more to complete the work than when A and B work together. B working alone would take  $3\frac{1}{2}$  hours more than when A and B work together. The time required to finish the work together is:

- Ans**
- 1. 7 hours
  - 2. 5 hours
  - 3. 6 hours
  - 4. 8 hours

Question ID : 65497815755  
Chosen Option : 1

**Q.15** If the difference between the selling prices of an article when sold at 18% discount and at 10.5% discount is ₹192, then the marked price of the article is:

- Ans**
- 1. ₹2,580
  - 2. ₹2,480
  - 3. ₹2,560
  - 4. ₹2,500

Question ID : 65497815760  
Chosen Option : 3

**Q.16** The average of 40% of a number and 33% of the same number is 73. The average of  $\frac{1}{5}$  th and  $\frac{1}{4}$  th of that number is:

- Ans**
- 1. 40
  - 2. 45
  - 3. 42
  - 4. 50

Question ID : 65497815759  
Chosen Option : 2

**Q.17** The radius of the base of a cone and also that of a hemisphere each is 14 cm. Also, the volumes of these two solids are equal. The curved surface area of the cone is:

(Take  $\pi = \frac{22}{7}$ )

- Ans**
- 1.  $614\sqrt{5}cm^2$
  - 2.  $626\sqrt{5}cm^2$
  - 3.  $616\sqrt{5}cm^2$
  - 4.  $516\sqrt{5}cm^2$

Question ID : 65497815771  
Chosen Option : 3

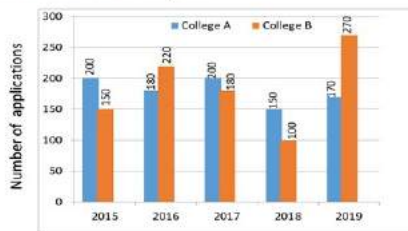
**Q.18** The slant height and the diameter of the base of a right circular cone are 34 cm and 32 cm, respectively. Its volume (in  $\text{cm}^3$ ) is:

- Ans
- 1.  $3200\pi$
  - 2.  $3840\pi$
  - 3.  $2560\pi$
  - 4.  $2880\pi$

Question ID : 65497814967  
Chosen Option : 3

**Q.19** Study the following bar graph and answer the question given below.

The given bar graph represents the total number of applications received for the B.Com course by two different colleges A and B in five different years.



The difference between the average number of applications received by college A from 2015 to 2019 and the average number of applications received by college B from 2015 to 2019 is:

- Ans
- 1. 8
  - 2. 6
  - 3. 5
  - 4. 4

Question ID : 65497815778  
Chosen Option : 4

**Q.20** If the volume of a cube is  $375\sqrt{3}\text{cm}^3$ , then its diagonal is:

- Ans
- 1. 10 cm
  - 2. 15 cm
  - 3. 14 cm
  - 4. 12 cm

Question ID : 65497815770  
Chosen Option : --

**Q.21** The sum of two numbers is 60 and their product is 875. The HCF of the numbers is:

- Ans
- 1. 6
  - 2. 8
  - 3. 5
  - 4. 7

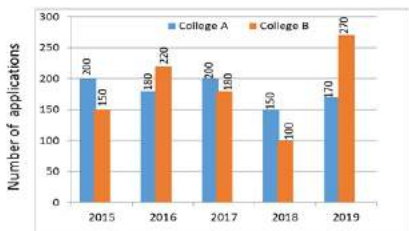
Question ID : 65497815773  
Chosen Option : --

**Q.22** Vaishnav left from place A at 11 a.m. for place B, and Suman left from place B at 2 p.m. for place A. The distance between them is 516 km. If Vaishnav's speed is 44 km/h and Suman's speed is 52 km/h, then at what time will they meet each other?

- Ans**
- 1. 7 p.m.
  - 2. 6 p.m.
  - 3. 5 p.m.
  - 4. 8 p.m.

Question ID : 65497815757  
Chosen Option : 2

**Q.23** Study the following bar graph and answer the question given below.  
The given bar graph represents the total number of applications received for the B.Com course by two different colleges A and B, in five different years.



The ratio of the total number of applications received by college A in 2016 and 2017 together to the total number of applications received by college B in 2016 and 2017 together is:

- Ans**
- 1. 18 : 19
  - 2. 15 : 17
  - 3. 19 : 20
  - 4. 15 : 19

Question ID : 65497815776  
Chosen Option : 3

**Q.24** Prasad bought 12 TV sets at ₹18,000 each and sold all of them at a total price of ₹2,59,200. Find his profit or loss percentage.

- Ans**
- 1. Profit 15%
  - 2. Loss 15%
  - 3. Loss 20%
  - 4. Profit 20%

Question ID : 65497815762  
Chosen Option : 4

Q.25 The value of  $21 \times [(9 - 4) \div \{(8 \div 8 \text{ of } 4) + (4 \div 4 \text{ of } 2)\}]$  is:

- Ans  1. 140  
 2. 80  
 3. 100  
 4. 20

Question ID : 65497817188  
Chosen Option : 1

Section : General Awareness

Q.1 As of July 2020, who among the following was the Union Minister of Road Transport and Highways?

- Ans  1. Kiren Rijju  
 2. Thawar Chand Gehlot  
 3. Nitin Gadkari  
 4. Piyush Goyal

Question ID : 65497818412  
Chosen Option : 3

Q.2 The gymnast Dipa Karmakar belongs to the state of \_\_\_\_\_.

- Ans  1. Maharashtra  
 2. Haryana  
 3. Manipur  
 4. Tripura

Question ID : 65497818408  
Chosen Option : 4

Q.3 Kolleru lake is located in the state of \_\_\_\_\_.

- Ans  1. Uttarakhand  
 2. Tamil Nadu  
 3. Andhra Pradesh  
 4. Kerala

Question ID : 65497818425  
Chosen Option : 3

Q.4 Who among the following was NOT a co-recipient of the Nobel Prize in Physics in 2019?

- Ans  1. Didier Queloz  
 2. Akira Yoshino  
 3. Michel Mayor  
 4. James Peebles

Question ID : 65497818421  
Chosen Option : 2



**Q.5** As on September 2020, in order to be a member of the Rajya Sabha one must not be less than \_\_\_\_\_ years of age.

- Ans
- 1. 25
  - 2. 30
  - 3. 18
  - 4. 21

Question ID : 65497818416  
Chosen Option : 2

**Q.6** \_\_\_\_\_ is the field of study concentrated on pregnancy, childbirth and the postpartum period.

- Ans
- 1. Ophthalmology
  - 2. Oncology
  - 3. Obstetrics
  - 4. Orthopedics

Question ID : 65497818419  
Chosen Option : 3

**Q.7** Who among the following is NOT a former President of India?

- Ans
- 1. KR Narayanan
  - 2. Shankar Dayal Sharma
  - 3. Vishwanath Pratap Singh
  - 4. Giani Zail Singh

Question ID : 65497818417  
Chosen Option : 3

**Q.8** In which year did Amartya Sen receive the Nobel Prize for Economics?

- Ans
- 1. 1998
  - 2. 2004
  - 3. 1997
  - 4. 1999

Question ID : 65497818514  
Chosen Option : 3

**Q.9** Which of the following waterfalls is in the state of Goa?

- Ans
- 1. Dudhsagar
  - 2. Duduma
  - 3. Gokak
  - 4. Shivasamudram

Question ID : 65497818426  
Chosen Option : 1

**Q.10 Badami was the earliest capital of the:**

Ans  1. Chalukyas

2. Sungas

3. Pallavas

4. Mauryas

Question ID : 65497818428

Chosen Option : 1

**Q.11 Which of the following is the chemical symbol of Curium?**

Ans  1. Cr

2. Cm

3. Ci

4. Cu

Question ID : 65497818422

Chosen Option : --

**Q.12 With reference to the Sustainable Development Goals of the United Nations, which of the following is Goal Number One?**

Ans  1. No poverty

2. Industry, innovation and infrastructure

3. Reduced inequalities

4. Zero hunger

Question ID : 65497818415

Chosen Option : --

**Q.13 In 1877, which of the following viceroys organised a durbar to acknowledge Queen Victoria as the Empress of India?**

Ans  1. Lord Lytton

2. Lord Ripon

3. Lord Minto

4. Lord Dufferin

Question ID : 65497818429

Chosen Option : --

**Q.14 In 1972, the West Bengal Forest Department recognised its failures in reviving the degraded \_\_\_\_\_ forests in South Western districts of the State.**

Ans  1. Palash

2. Sal

3. Piyal

4. Segun

Question ID : 65497818423

Chosen Option : --

**Q.15 Who among the following is the author of the book 'Kanthapura'?**

- Ans  1. Nirad Choudhuri  
 2. Sitakanta Mohapatra  
 3. Raja Rao  
 4. Kamala Das

Question ID : 65497818410

Chosen Option : --

**Q.16 Which of the following forts was built by the Kakatiya dynasty?**

- Ans  1. Panhala  
 2. Raigad  
 3. Neemrana  
 4. Golconda

Question ID : 65497818407

Chosen Option : 3

**Q.17 How many oxygen atoms are there in a molecule of ozone?**

- Ans  1. One  
 2. Four  
 3. Two  
 4. Three

Question ID : 65497818420

Chosen Option : 4

**Q.18 Which of the following is NOT a town of Karnataka?**

- Ans  1. Chikmagalur  
 2. Bijapur  
 3. Chitradurga  
 4. Bhusawal

Question ID : 65497818424

Chosen Option : 4

**Q.19 The name of Guru Kelu Charan Mohapatra is primarily associated with which of the following dances?**

- Ans  1. Mohiniattam  
 2. Sattariya  
 3. Kathak  
 4. Odissi

Question ID : 65497818405

Chosen Option : 4

**Q.20** An asset that has remained in the substandard category for a period of 12 months is classified as a \_\_\_\_\_ asset by a bank.

- Ans
- 1. liquid
  - 2. non-performing
  - 3. doubtful
  - 4. loss

Question ID : 65497816293  
Chosen Option : --

**Q.21** Which of the following Harappan sites is located in Afghanistan?

- Ans
- 1. Shortughai
  - 2. Balakot
  - 3. Nageswar
  - 4. Kalibangan

Question ID : 65497818427  
Chosen Option : 1

**Q.22** India hosted the Commonwealth Games in:

- Ans
- 1. 2012
  - 2. 2018
  - 3. 2006
  - 4. 2010

Question ID : 65497818409  
Chosen Option : 4

**Q.23** Which of the following is a form of devotional poetry sung in praise of God Vithoba?

- Ans
- 1. Shabad
  - 2. Abhang
  - 3. Tevaram
  - 4. Bhatiali

Question ID : 65497818406  
Chosen Option : --

**Q.24** Who among the following was the first recipient of Padma Vibhushan?

- Ans
- 1. JRD Tata
  - 2. Satyendra Nath Bose
  - 3. Hargobind Khorana
  - 4. John Matthai

Question ID : 65497818411  
Chosen Option : --

**Q.25** As per the Consumer Protection Act, 1986 a complaint can be filed in the District Consumer Disputes Redressal Forum if the value of the claim is up to:

- Ans**
- 1. ₹5 lakh
  - 2. ₹15 lakh
  - 3. ₹20 lakh
  - 4. ₹10 lakh

Question ID : **65497818418**  
Chosen Option : 1