

ACIO Grade II Executive 18th Feb 2021

Participant ID	122340800491
Participant Name	GAYATHRY MOHAN
Test Center Name	ION Digital Zone IDZ Thrissur
Test Date	18/02/2021
Test Time :	9:00 AM - 10:00 AM
Subject	ACIO Grade II (Executive)

Section : General awareness Current Affairs

Q.1 Which of the following states has announced the commissioning of its own internet service under the project named K-FON?

- Ans
- 1. Goa
 - 2. Kerala
 - 3. Gujarat
 - 4. Karnataka

Question ID : 59445929006
Status : Answered
Chosen Option : 2

Q.2 Consider the statement related with Campaign 'SAKSHAM'.

1. To create awareness among the consumers of fossil fuels.
2. The campaign will include activities such as cyclothon, farmer workshops, seminars, painting competition for awareness.

Select the correct answer by using the code mentioned below.

- Ans
- 1. Both 1 and 2
 - 2. Neither 1 nor 2
 - 3. Only 2
 - 4. Only 1

Question ID : 59445929015
Status : Not Answered
Chosen Option : --

Q.3 Consider the statement in regard of Nikhil Srivastav.

1. He is the winner of the prestigious 2021 Michael and Sheila Held Prize.
2. He won the prize for classifying and describing the structure of algebraic varieties.

Select the correct answer by using the code mentioned below.

- Ans
- 1. Neither 1 nor 2
 - 2. Both 1 and 2
 - 3. Only 1
 - 4. Only 2

Question ID : 59445929012
Status : Answered
Chosen Option : 2

Q.4 Elon Musk's SpaceX creates new world record by launching many satellites on single rocket. Consider the following statement in this regard.

1. This created a new world record by launching 143 satellites on a single rocket.
2. It includes commercial and government CubeSats, microsats and 10 Starlink satellites.

Which Statements given above is/are correct?

- Ans
- 1. Only 1
 - 2. Only 2
 - 3. Both 1 and 2
 - 4. Neither 1 nor 2

Question ID : 59445929018
Status : Answered
Chosen Option : 3

Q.5 The FIFA Women's World Cup 2023™ will be staged in which country?

1. Brazil
2. America and New Zealand Jointly.

Select the correct answer by using the code mentioned below.

- Ans
- 1. Only 1
 - 2. Both 1 and 2
 - 3. Neither 1 nor 2
 - 4. Only 2

Question ID : 59445929019
Status : Answered
Chosen Option : 4

Q.6 Which of the following statement is true in regard of "UNESCO-Bangladesh Bangabandhu Sheikh Mujibur Rahman International Prize for the Creative Economy"

1. It was approved at the 210th session of UNESCO's Executive Board of UNESCO.
2. An amount of US\$100,000 will be given to the recipients of the award.

Select the correct answer by using the code mentioned below.

- Ans
- 1. Both 1 and 2
 - 2. Only 2
 - 3. Neither 1 nor 2
 - 4. Only 1

Question ID : 59445929011
Status : Not Answered
Chosen Option : --

Q.7 What is Rakshita?

1. It is an ambulance which has been launched by the Central Reserve Police Force (CRPF) and Defence Research and Development Organisation (DRDO).
2. It is an ambulance to attend urgent evacuation needs of the security force personnel in event of a medical emergency or battle injury.
3. It is developed by Border Security Forces (BSF) for urgent evacuation in event of a medical emergency or battle injury.

Select the correct answer by using the code mentioned below.

- Ans
- 1. Only 1
 - 2. Only 2
 - 3. Only 2 and 3
 - 4. Only 1 and 2

Question ID : 59445929014

Status : Not Answered

Chosen Option : --

Q.8 "On 27th July 2020, Ministry of Electronics and Information Technology (MeitY) introduced PLI or Production Linked Incentive Scheme for pharmaceutical manufacturing. Which of the following points is/are NOT covered under this scheme?

1. Production Linked Incentives of upto INR 6,940 crores have been approved
2. A financial incentive will be given to eligible manufacturers of identified 41 eligible products which covers 53 APIs, for 6 years, committed investment and sales made by selected applicant for the eligible products.
3. The Net Worth of the Applicant (including that of Group Companies), as on the date of application, shall not be less than 30% of the total committed investment.
4. The scheme shall be operational during the period FY 2020-2021 to 2024-2025

Select the correct answer using the code given below.

- (A) 1 only
- (B) 2 only
- (C) 3 and 4
- (D) 4 only

- Ans
- 1. C
 - 2. D
 - 3. A
 - 4. B

Question ID : 59445929017

Status : Not Answered

Chosen Option : --

Q.9 Match list I (Author) with list II (Books) and select the correct answer using the code given below the list.

List I (Author)	List II (Books)
A. Chinmoy Guha	1. Ghumer Darja Thele
B. Dharman	2. Sool
C. Shyam Besra	3. Marom
D. Sashi Tharoor	4. An Era of Darkness: The British Empire in India

Code

- A) A B C D
 1 2 3 4
- B) A B C D
 2 3 1 4
- C) A B C D
 3 2 1 4
- D) A B C D
 1 3 2 4

- Ans 1. C
 2. B
 3. A
 4. D

Question ID : **59445929016**
Status : **Not Answered**
Chosen Option : --

Q.10 Which of the following company has announced that it has agreed to acquire majority stake in GVK Airport Developers Ltd that runs the Mumbai International airport?

- Ans 1. PepsiCo India Holdings Private Limited
 2. Reliance Industries Limited
 3. GMR Infrastructure Limited
 4. Adani Airport Holdings Ltd.

Question ID : **59445929009**
Status : **Not Answered**
Chosen Option : --

Q.11 Which country has decided to construct monument for the Indian Soldiers killed by Pakistan in the 1971 Liberation War?

- Ans 1. Nepal
 2. Bangladesh
 3. Sri Lanka
 4. Afghanistan

Question ID : **59445929005**
Status : **Not Answered**
Chosen Option : --

Q.12 Who has released the book, "India 2020 yearbook"?

- Ans 1. Prakash Javadekar
 2. Amit Shah
 3. Narendra Modi
 4. Shashi Tharoor

Question ID : 59445929001
Status : Answered
Chosen Option : 3

Q.13 From which countries does IC-IMPACTS Research Centre of Excellence belong?

- Ans 1. India and Russia
 2. India and Canada
 3. India and Japan
 4. India and France

Question ID : 59445929004
Status : Answered
Chosen Option : 2

Q.14 In August 2020, the Africa Regional Certification Commission certified the WHO African Region as free from _____ after four years without a case?

- Ans 1. Chicken pox
 2. Rubella
 3. Wild polio
 4. Tetanus

Question ID : 59445929010
Status : Not Answered
Chosen Option : --

Q.15 India has tied up for 8 million pounds medicinal research in July 2020 with UK. What is the ratio of the contribution of UK and India?

- Ans 1. 1 : 3
 2. 1 : 1
 3. 1 : 2
 4. 2 : 1

Question ID : 59445929008
Status : Answered
Chosen Option : 4

Q.16 The Union Cabinet approved the adoption of the Jammu and Kashmir Panchayati Raj Act, 1989.

1. The move will help establish all the four tiers of grassroots-level democracy in Jammu and Kashmir.
2. This will help the people of Jammu and Kashmir elect their representatives at the village, block and district levels.

Select the correct answer using the code given below.

- Ans
- 1. Only 1
 - 2. Both 1 and 2
 - 3. Neither 1 nor 2
 - 4. Only 2

Question ID : 59445929013

Status : Answered

Chosen Option : 2

Q.17 In 2020, there are 5 cyclones formed in the north Indian ocean. Which of the following severe cyclonic storms formed over Arabian seas and headed towards the Somalia coast?

1. Gati
2. Amphan
3. Nisarga

Select the correct answer using the code given below.

- (A) 1 only
- (B) 2 only
- (C) Both 1 and 2
- (D) both 2 and 3

- Ans
- 1. D
 - 2. B
 - 3. A
 - 4. C

Question ID : 59445929020

Status : Not Answered

Chosen Option : --

Q.18 For which country's Navy China has launched first of the four Advanced Warships in August 2020?

- Ans
- 1. Sri Lanka
 - 2. India
 - 3. Pakistan
 - 4. Kenya

Question ID : 59445929003

Status : Answered

Chosen Option : 3

Q.19 Who has been appointed as the governor of Meghalaya in August 2020?

- Ans
- 1. R.N. Ravi
 - 2. Acharya Devvrat
 - 3. S. Narayan Arya
 - 4. Satya Pal Malik

Question ID : **59445929002**
Status : **Answered**
Chosen Option : **2**

Q.20 IAS officer Vini Mahajan became the first Woman Chief Secretary of which state in June 2020?

- Ans
- 1. Haryana
 - 2. UP
 - 3. Punjab
 - 4. Rajasthan

Question ID : **59445929007**
Status : **Not Attempted and Marked For Review**
Chosen Option : **--**

Section : **General studies**

Q.1 Which of the following statements refers to the process of 'parthenogenesis'?

1. It is a natural form of asexual reproduction in which growth and development of embryos occur without fertilisation.
2. It is a mode of reproduction in which a male organism's sperm fertilises a female organism's egg outside of the female's body.
3. It is a mode of reproduction in which a male organism's sperm fertilises a female organism's egg inside of the female's body.

Select the correct answer using the codes given below.

- Ans
- 1. Only 1
 - 2. Only 1 and 2
 - 3. Only 3
 - 4. Only 2

Question ID : **59445929033**
Status : **Answered**
Chosen Option : **1**

Q.2 Which of the following pair of monument – state is correct?

- I. Sheikh Chilli's Tomb – Haryana
- II. Chitradurga Fort – Karnataka

- Ans
- 1. Only II
 - 2. Only I
 - 3. Both I and II
 - 4. Neither I nor II

Question ID : 59445929021
Status : Answered
Chosen Option : 3

Q.3 Which of the following are / is fundamental duties / duty in the Constitution of India?

- 1. An Indian citizen must develop scientific temper, humanism and the spirit of inquiry and reform.
- 2. A parent or guardian must provide opportunities for education to one's child or ward between the age of six and fourteen years.
- 3. An Indian citizen must value and preserve the rich heritage of the country's composite culture.

- Ans
- 1. Only 1 and 2
 - 2. Only 2 and 3
 - 3. 1, 2 and 3
 - 4. Only 1 and 3

Question ID : 59445929040
Status : Answered
Chosen Option : 2

Q.4 In which Indian state is the Barabati Fort located?

- Ans
- 1. Kerala
 - 2. West Bengal
 - 3. Maharashtra
 - 4. Odisha

Question ID : 59445929028
Status : Not Answered
Chosen Option : --

Q.5 When was the Lucknow Pact Signed by the Muslim League and the Indian National Congress?

- Ans
- 1. 1919
 - 2. 1905
 - 3. 1925
 - 4. 1916

Question ID : 59445929024
Status : Not Attempted and Marked For Review
Chosen Option : --

Q.6 The book 'An Extraordinary life' is based on whose biography?

- Ans
- 1. Atal Bihari Vajpayee
 - 2. Sushma Swaraj
 - 3. Manohar Parrikar
 - 4. Arun Jaitley

Question ID : 59445929022
Status : Answered
Chosen Option : 3

Q.7 Match List-I with List-II and select the correct answer using the codes given below the Lists.

List-I (Rajiv Gandhi Khel Ratna awardees of 2020)	List-II (Sport with which they are associated)
A. Rohit Sharma	1. Para Athletics
B. Vinesh	2. Cricket
C. Mariyappan	3. Table Tennis
D. Manika Batra	4. Wrestling

- Ans
- 1. A-2, B-3, C-1, D-4
 - 2. A-2, B-1, C-4, D-3
 - 3. A-2, B-4, C-1, D-3
 - 4. A-2, B-1, C-3, D-4

Question ID : 59445929034
Status : Answered
Chosen Option : 3

Q.8 Consider the following statements with reference to taxation in Budget 2020.

1. Dividend Distribution Tax (DDT) was abolished.
2. Tax on cooperative societies was to be reduced to 22% plus surcharge and cess as against 30% at present.

Which of the statements given above is/are correct?

- Ans
- 1. Only 1
 - 2. Both 1 and 2
 - 3. Neither 1 nor 2
 - 4. Only 2

Question ID : 59445929032
Status : Not Answered
Chosen Option : --

Q.9 Spirogyra is an example of which of the following algae?

- Ans
- 1. Red algae
 - 2. Brown algae
 - 3. White algae
 - 4. Green algae

Question ID : 59445929029
Status : Answered
Chosen Option : 2

Q.10 Consider the following statements in reference to Harsha Chhina Mogha Morcha.

1. It was an agrarian revolt launched in June 1946 by remodelling the canal outlets under the leadership of the communist party.
2. The campaign was launched against the decision of the British government to decrease the supply of irrigation water to farmers.

Which of the statements given above is/are correct?

- Ans
- 1. Only 1
 - 2. Both 1 and 2
 - 3. Neither 1 nor 2
 - 4. Only 2

Question ID : 59445929031
Status : Not Answered
Chosen Option : --

Q.11 _____ is composed of unspecialized living cells with relatively thin cell walls, intercellular space, present in soft part of the plants.

- Ans
- 1. Sclerenchyma
 - 2. Parenchyma
 - 3. Complex permanent tissue
 - 4. Collenchyma

Question ID : 59445929025
Status : Not Attempted and Marked For Review
Chosen Option : --

Q.12 Who among the following Indian personalities is also known as 'Young Turk'?

- Ans
- 1. Chandra Shekhar
 - 2. Lala Lajpat Rai
 - 3. Bhagat Singh
 - 4. Bal Gangadhar Tilak

Question ID : 59445929030
Status : Not Attempted and Marked For Review
Chosen Option : --

Q.13 Rajinder Goel is related to which sport?

- Ans 1. Swimming
 2. Gymnastics
 3. Table tennis
 4. Cricket

Question ID : 59445929023
Status : Not Answered
Chosen Option : --

Q.14 Which of the following compounds act/s as buffering agents in soil?

1. Carbonates
2. Phosphates
3. Arsenates

- Ans 1. Only 3
 2. Only 1 and 2
 3. Only 1
 4. Only 2

Question ID : 59445929039
Status : Answered
Chosen Option : 4

Q.15 Over how many Indian states does the Deccan Plateau extend?

- Ans 1. 5
 2. 8
 3. 6
 4. 3

Question ID : 59445929026
Status : Answered
Chosen Option : 2

Q.16 Consider the following statements regarding the 'Health in India-2020 Report' released by the Ministry of Statistics and Programme Implementation.

1. The report highlighted the health of religious communities in the country.
2. Among all the religions, the Zoroastrians were the most susceptible to ailments.
3. Women remained more susceptible to suffering than men.
4. The report stated that the relation between health and religion is not important.

Which of the statements given above are correct?

- Ans**
- 1. Only 1 and 2
 - 2. Only 1 and 3
 - 3. Only 1, 3 and 4
 - 4. Only 1, 2 and 3

Question ID : **59445929038**
Status : **Answered**
Chosen Option : **4**

Q.17 Consider the following statements in reference to the Gogona musical instrument of India.

1. It is the most simple and smallest Indian rural musical instrument.
2. It originated in Manipur.
3. It is a mouth instrument made from a single piece of bamboo with a split at one end.
4. It is a part of the musical culture of the Meitei community.

Which of the statements given above are correct?

- Ans**
- 1. Only 1 and 3
 - 2. Only 2, 3 and 4
 - 3. Only 1, 2 and 3
 - 4. Only 1 and 2

Question ID : **59445929037**
Status : **Not Answered**
Chosen Option : **--**

Q.18 Match List-I with List-II and select the correct answer using the code given below the Lists.

List-I (Chalcolithic culture sites)	List-II (Rivers of sites of Chalcolithic culture)
A. Ahar	1. Tapi
B. Kayatha	2. Narmada
C. Svalda	3. Kalisindh
D. Malwa	4. Banas

- Ans**
- 1. A-2, B-4, C-1, D-3
 - 2. A-4, B-3, C-1, D-2
 - 3. A-2, B-1, C-4, D-3
 - 4. A-1, B-3, C-2, D-4

Question ID : **59445929036**
Status : **Not Answered**
Chosen Option : **--**

Q.19 Which of the following bodies had introduced the first official residential housing price index called RESIDEX?

- Ans
- 1. NITI Aayog
 - 2. SEBI
 - 3. NHB
 - 4. RBI

Question ID : 59445929027
Status : Answered
Chosen Option : 3

Q.20 Karakoram, a mountain range, is of great geopolitical significance as:

1. It connects India and China
2. It serves as a watershed for the basins of the Indus and Yarkand rivers
3. The borders of India, China, Pakistan along Afghanistan and Tajikistan all converge within the Karakoram system

Select the correct answer using the codes given below.

- Ans
- 1. Only 1 and 2
 - 2. Only 3
 - 3. Only 2 and 3
 - 4. Only 2

Question ID : 59445929035
Status : Answered
Chosen Option : 1

Section : Numerical aptitude

Q.1 Find the volume of a sphere with diameter as 21 cm. (The value of π is $22/7$)

- Ans
- 1. 4851 cu cm
 - 2. 4132 cu cm
 - 3. 3361 cu cm
 - 4. 4441 cu cm

Question ID : 59445929048
Status : Answered
Chosen Option : 1

Q.2 Sanjay and Amit can do a piece of work in 8 days. Amit alone can do it in 12 days. In how many days will Sanjay do it alone?

- Ans
- 1. 20 days
 - 2. 24 days
 - 3. 16 days
 - 4. 12 days

Question ID : 59445929047
Status : Answered
Chosen Option : 2

Q.3 Find the total surface area of cube whose volume is 64 m^3 .

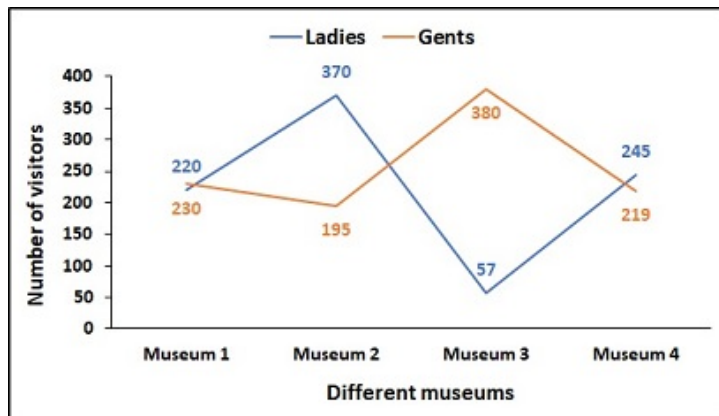
- Ans
- 1. 64 m^2
 - 2. 96 m^2
 - 3. 36 m^2
 - 4. 25 m^2

Question ID : 59445929057

Status : Answered

Chosen Option : 2

Q.4 The graph shows number of visitors (ladies and gents) in four different museums namely 1, 2, 3 and 4. Which museum had the maximum number of visitors?



- Ans
- 1. 1
 - 2. 3
 - 3. 4
 - 4. 2

Question ID : 59445929055

Status : Answered

Chosen Option : 4

Q.5 The ratio of two numbers a and b is $7 : 15$, respectively. Their least common multiple is 840. What is $(b + a) : (b - a)$?

- Ans
- 1. $15 : 4$
 - 2. $11 : 4$
 - 3. $15 : 11$
 - 4. $7 : 11$

Question ID : 59445929043

Status : Answered

Chosen Option : 2

Q.6 Find the rate of interest if amount after 2 years on simple interest on a capital of Rs 1000 is Rs 1200.

- Ans
- 1. 5 percent
 - 2. 20 percent
 - 3. 10 percent
 - 4. 15 percent

Question ID : 59445929045
Status : Answered
Chosen Option : 3

Q.7 LCM and HCF of two numbers are respectively 3 and 18. If one of them is 9, find the other number.

- Ans
- 1. 6
 - 2. 9
 - 3. 8
 - 4. 3

Question ID : 59445929042
Status : Answered
Chosen Option : 1

Q.8 The average of 5 consecutive numbers is 21. The highest number will be?

- Ans
- 1. 21
 - 2. 23
 - 3. 22
 - 4. 19

Question ID : 59445929060
Status : Answered
Chosen Option : 2

Q.9 Simplify the following.

$$\left[\left(1 - \frac{1}{2}\right) \left(1 - \frac{1}{3}\right) \left(1 - \frac{1}{4}\right) \dots \left(1 - \frac{1}{100}\right) \right]^{-0.5}$$

- Ans
- 1. $\frac{1}{100}$
 - 2. $\frac{1}{10}$
 - 3. 100
 - 4. 10

Question ID : 59445929041
Status : Answered
Chosen Option : 4

Q.10 The table shows expenditure and income of a firm in various months. In which month was ratio of savings to income maximum.

Month	Salary	Expenditure
Jan	40,000	28,000
Feb	35,000	30000
March	37000	30000
April	42000	32000
May	45000	31000

- Ans
- 1. April
 - 2. Feb
 - 3. Jan
 - 4. May

Question ID : 59445929049
Status : Answered
Chosen Option : 4

Q.11 A passenger train consists of 18 bogies, each bogie being 15 m long. The train crosses an electric post in 15 sec. Due to some problem, three bogies were detached. The train now crosses the electric post in _____ sec.

- Ans
- 1. 10.5
 - 2. 14
 - 3. 12.5
 - 4. 11

Question ID : 59445929051
Status : Answered
Chosen Option : 3

Q.12 The marks of 5 students are 25, 35, 45, 50, 15. Calculate the average marks.

- Ans
- 1. 30
 - 2. 34
 - 3. 35
 - 4. 32

Question ID : 59445929054
Status : Answered
Chosen Option : 2

Q.13 Arun & Bijay can make paintings in 3 days, Bijay & Chandan can make those paintings in 5 days. If Arun, Bijay & Chandan together can finish the work in 2 days, then Arun & Chandan together will do it in _____ days.

- Ans
- 1. $\frac{4}{3}$ days
 - 2. $\frac{8}{7}$ days
 - 3. $\frac{15}{7}$ days
 - 4. 5 days

Question ID : 59445929056
Status : Answered
Chosen Option : 3

Q.14 The ratio of the length of the parallel sides of a trapezium is 3 : 2. The shortest distance between them is 15 cm. If the area of the trapezium is 1350 sq. cm, then find the difference of the lengths of the parallel sides.

- Ans
- 1. 95 cm
 - 2. 21 cm
 - 3. 36 cm
 - 4. 65 cm

Question ID : 59445929059
Status : Answered
Chosen Option : 3

Q.15 In 87659_21 what is the least number that can be filled in blank to make the number divisible by 11.

- Ans
- 1. 7
 - 2. 1
 - 3. 3
 - 4. 2

Question ID : 59445929053
Status : Answered
Chosen Option : 2

Q.16 A boat goes 20 km downstream in 30 mins. The speed of the stream is 10 km/h. Find the speed of the boat.

- Ans
- 1. 45 km/h
 - 2. 20 km/h
 - 3. 60 km/h
 - 4. 30 km/h

Question ID : 59445929052
Status : Answered
Chosen Option : 4

Q.17 Find a single discount equivalent to two successive discounts of 15 percent and 5 percent.

- Ans 1. 19.25
 2. 20.20
 3. 10.5
 4. 18.75

Question ID : 59445929044
Status : Answered
Chosen Option : 1

Q.18 25 percent of a number when subtracted from 100, gives the number itself. Find the number?

- Ans 1. 80
 2. 75
 3. 32
 4. 100

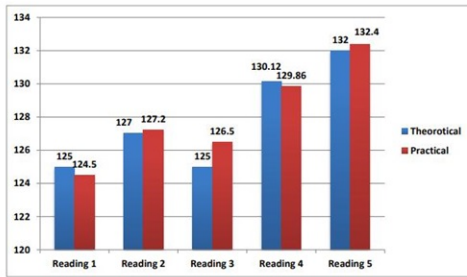
Question ID : 59445929050
Status : Answered
Chosen Option : 1

Q.19 The ratio of two numbers is 3 : 5 and their LCM is 42 greater than their HCF. What is the value of the larger number?

- Ans 1. 18
 2. 12
 3. 15
 4. 9

Question ID : 59445929058
Status : Answered
Chosen Option : 3

Q.20 The given bar graph represents both, theoretical and practical readings obtained in 5 rounds of readings while conducting a scientific experiment.



What is the ratio of the difference obtained in readings 2 and 5 when calculated theoretically to the difference obtained in readings 1 and 3 when readings were taken practically?

- Ans**
- 1. 1 : 1
 - 2. 3 : 2
 - 3. 2 : 1
 - 4. 5 : 2

Question ID : 59445929046
Status : Answered
Chosen Option : 4

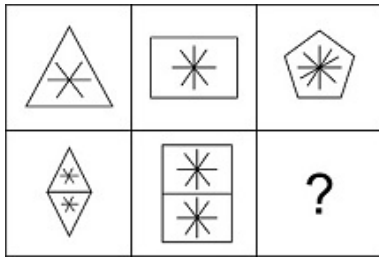
Section : Reasoning Logical aptitude

Q.1 In a certain code language, BABE is coded as ZZYV then what is the code for ACID?

- Ans**
- 1. ZXNR
 - 2. YVOS
 - 3. ZXRW
 - 4. ZXWR

Question ID : 59445929068
Status : Answered
Chosen Option : 3

Q.2 Identify the missing figure from the answer figures to complete the matrix given below.



Ans

- ✓ 1.
- ✗ 2.
- ✗ 3.
- ✗ 4.

Question ID : 59445929070
 Status : Answered
 Chosen Option : 1

Q.3 Find the missing term in the following series.

AD25, CE64, EF121, GG196, _____

- Ans
- ✗ 1. IJ441
 - ✗ 2. II324
 - ✗ 3. IH256
 - ✓ 4. IH289

Question ID : 59445929078
 Status : Answered
 Chosen Option : 4

Q.4 In the following question below are given some statements followed by some conclusions based on those statements. Taking the given statements to be true even if they seem to be at variance from commonly known facts. Read all the conclusions and then decide which of the given conclusion logically follows the given statements.

Statements:

- I. No R is V.
- II. No L is M.
- III. No R is L.

Conclusions:

- I. Some V are not M.
- II. No M is L.
- III. Some L are not R.

- Ans**
- 1. All conclusion follows
 - 2. Both conclusion I and III follows
 - 3. Both conclusion II and III follows
 - 4. Both conclusion I and II follows

Question ID : 59445929071

Status : Answered

Chosen Option : 3

Q.5 Find the missing term in the following number series.

45, 65, 165, 345, _____

- Ans**
- 1. 625
 - 2. 565
 - 3. 605
 - 4. 585

Question ID : 59445929064

Status : Answered

Chosen Option : 3

Q.6 Among 500 villagers, 40% are doing businesses and 80% are doing jobs. If all of them are either doing business or jobs, then the number of villagers who are doing only job are how much more than that who are doing only business?

- Ans**
- 1. 400
 - 2. 100
 - 3. 200
 - 4. 300

Question ID : 59445929063

Status : Answered

Chosen Option : 3

Q.7 A series is given, with one term missing. Choose the correct alternative from the given ones that will complete the series.

DF, GJ, KM, NQ, RT, ?

- Ans
- 1. XY
 - 2. EI
 - 3. UX
 - 4. UV

Question ID : 59445929067

Status : Answered

Chosen Option : 3

Q.8 Find the missing term in the following letter series.

ACE, JLN, RTV, ____

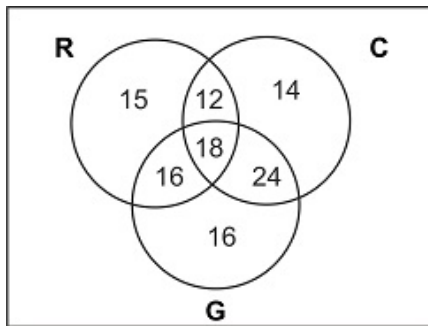
- Ans
- 1. ZBD
 - 2. YAC
 - 3. ACE
 - 4. XZB

Question ID : 59445929077

Status : Answered

Chosen Option : 2

Q.9 In the given Venn diagram, "Group R" represents those who have visited "Russia", "Group C" represents those who have visited "China" and "Group G" represents those who have visited "Japan". The number given in the diagram represent the number of persons in that particular category. If out of the total number of persons who have visited at least two countries, 60% are females then how many of them are males?



- Ans
- 1. 32
 - 2. 24
 - 3. 28
 - 4. 42

Question ID : 59445929069

Status : Answered

Chosen Option : 3

Q.10 In the question two statements are given, followed by two conclusions, I and II. You have to consider the statements to be true even if it seems to be at variance from commonly known facts. You have to decide which of the given conclusions, if any, follows from the given statements.

Statement 1 : All roses are Pink.
Statement 2 : Some Pinks are Lotus.

Conclusion I : All Lotus are Roses.
Conclusion II : Some Pinks are Roses.

- Ans 1. Only conclusion II follows
 2. Neither I nor II follows
 3. Both I and II follows
 4. Only conclusion I follows

Question ID : 59445929073
Status : Answered
Chosen Option : 1

Q.11 Select the option that is related to the third number in the same way as the second number is related to the first number.

7 : 393 :: 9 : ?

- Ans 1. 729
 2. 810
 3. 812
 4. 811

Question ID : 59445929076
Status : Answered
Chosen Option : 4

Q.12 Find the missing number in the matrix given below:

27	12	225
26	13	169
30	21	?
26	12	196

- Ans 1. 100
 2. 64
 3. 81
 4. 121

Question ID : 59445929072
Status : Answered
Chosen Option : 3

Q.13 In the question given below, three statements are given, followed by two conclusions I and II. You have to consider the statement/statements to be true even if it seems to be at variance from commonly known facts. You have to decide which of the given conclusions, if any, follows from the given statements.

Statements:

Some mobiles are laptops.
All laptops are cameras.
No camera is desktop.

Conclusion:

I. All desktop being mobile is a possibility.
II. All mobile being cameras is a possibility.

- Ans**
- 1. Only II follows
 - 2. Both I and II follows
 - 3. Neither I nor II follows
 - 4. Only I follows

Question ID : 59445929061

Status : Answered

Chosen Option : 2

Q.14 6 boys are sitting on 6 different chairs numbered 1 to 6. A is sitting neither on chair 2 nor on chair 5. F is sitting either on chair 4 or on chair 6. E is sitting on the chair 1 and D is sitting on the chair 3. If B is sitting either on chair 2 or chair 4 then on which chair is C sitting?

- Ans**
- 1. 4
 - 2. 6
 - 3. 2
 - 4. 5

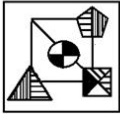
Question ID : 59445929074

Status : Answered

Chosen Option : 4

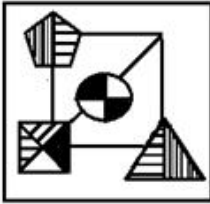
Q.15 Which of the answer figures is the exact mirror image of the given problem figure when the mirror is held at the right side?

Problem figure:

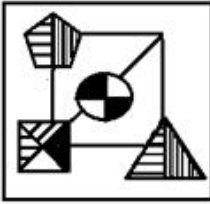


Ans

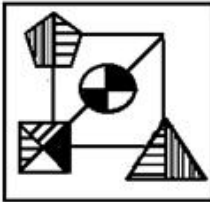
✓ 1.



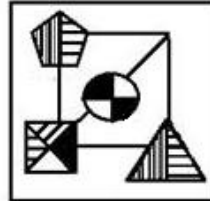
✗ 2.



✗ 3.



✗ 4.



Question ID : 59445929080

Status : Answered

Chosen Option : 1

Q.16 There is a family of six members. There are two married couples. X is a daughter of F, who has two children. F is the mother of Y. Y is the husband of A. Z is nephew of X. B is the husband of X. B has no siblings. How is B related to F?

Ans ✗ 1. Daughter - in - Law

✓ 2. Son - in - Law

✗ 3. Sister - in Law

✗ 4. Mother - in - Law

Question ID : 59445929075

Status : Answered

Chosen Option : 2

Q.17 Select the option that is related to the third term on the same basis as the second term is related to the first term.

Warrior : Sword :: Author : ?

- Ans
- 1. Page
 - 2. Ink
 - 3. Book
 - 4. Pen

Question ID : 59445929065
Status : Answered
Chosen Option : 4

Q.18 Pointing to a child in the photograph, a gentleman said "His father's father is my brother." How is this gentleman related to the child?

- Ans
- 1. Grand – father
 - 2. Uncle
 - 3. Can't be determined
 - 4. Grand – uncle

Question ID : 59445929062
Status : Answered
Chosen Option : 4

Q.19 'A + B' means 'A is the son of B', 'A - B' means 'A is the daughter of B', 'A × B' means 'A is the mother of B', 'A ÷ B' means 'A is the brother of B'. Which of the following equations indicates that 'G is the son of D'?

- Ans
- 1. $F + G \times E \div D - C$
 - 2. $F + G \div E \times D - C$
 - 3. $G + F \times E - D \div C$
 - 4. $G \times F + E \div D - C$

Question ID : 59445929079
Status : Answered
Chosen Option : 3

Q.20 25 customers are standing in a row outside a supermarket. Rahul, a customer standing in the row, was shifted by 5 places towards the left end and 6 new customers joined from the left end, then he became 11th from the left end. What was his earlier position from the right end?

- Ans
- 1. 17th
 - 2. 14th
 - 3. 16th
 - 4. 15th

Question ID : 59445929066
Status : Answered
Chosen Option : 4

Q.1 Select the most appropriate meaning of the given idiom.

"Go down like a lead balloon"

- Ans
- 1. To be ready
 - 2. To get away from, to escape
 - 3. To be received badly by an audience
 - 4. To gamble everything you have

Question ID : 59445929098
Status : Answered
Chosen Option : 3

Q.2 The sentence below has been divided into three parts. Select the part of the sentence that has an error. If the sentence has no error, select the option 'No Error'.

- Ans
- 1. necessary measures to contain the spread of the virus.
 - 2. in there opinion in the matters of taking
 - 3. The assembly was clearly divided
 - 4. No error

Question ID : 59445929082
Status : Answered
Chosen Option : 2

Q.3 Some parts of a sentence have been jumbled up, and labelled P, Q, R and S. Select the option that gives the correct sequence in which these parts can be rearranged to form a meaningful and grammatically correct sentence.

For it was but a pool

P. of hopes and nothing more,

Q. his words did not

R. action and efforts

S. coincide with his

which were needed.

- Ans
- 1. PQSR
 - 2. RPQS
 - 3. SQPR
 - 4. PSQR

Question ID : 59445929091
Status : Answered
Chosen Option : 1

Q.4 Out of all the alternatives given, select the word which closely fits the given idiom/phrase.

Don't count your chickens before they hatch

- Ans**
- 1. Good things come after bad things.
 - 2. To describe exactly what is causing a situation or problem.
 - 3. Do something without having planned beforehand.
 - 4. Don't count on something good happening until it's happened.

Question ID : 59445929094
Status : Answered
Chosen Option : 4

Q.5 The sentence below has been divided into three parts. Select the part of the sentence that has an error. If the sentence has no error, select the option 'No Error'.

- Ans**
- 1. In what turned out to be thrilling
 - 2. out on top and won the game.
 - 3. No error
 - 4. finish, the home team finally came

Question ID : 59445929081
Status : Answered
Chosen Option : 1

Q.6 Four words are given, out of which only one word is spelt correctly. Choose the word with the correct spelling.

- Ans**
- 1. Didactic
 - 2. Didaict
 - 3. Diadictic
 - 4. Didiactic

Question ID : 59445929097
Status : Not Answered
Chosen Option : --

Q.7 Some parts of a sentence have been jumbled up, and labelled P, Q, R and S. Select the option that gives the correct sequence in which these parts can be rearranged to form a meaningful and grammatically correct sentence.

The Government reforms imposed by

P. series of major social, political, legal and

Q. the Great Reforms by historians, were a

R. governmental reforms in the

S. Tsar Alexander II of Russia, often called

Russian Empire carried out in the 1860s.

- Ans
- 1. RSQP
 - 2. SRQP
 - 3. SQPR
 - 4. PSQR

Question ID : 59445929090
Status : Answered
Chosen Option : 3

Q.8 Identify the segment in the sentence which contains a grammatical error.

I knew that Aparna was speaking the truth and decided to stand besides her during the trial.

- Ans
- 1. was speaking
 - 2. I knew
 - 3. decided to
 - 4. stand besides her

Question ID : 59445929083
Status : Answered
Chosen Option : 4

Q.9 Select the word that is opposite in meaning (ANTONYM) to the word given below.

Ameliorate

- Ans
- 1. Retrieve
 - 2. Worsen
 - 3. Relieve
 - 4. Startle

Question ID : 59445929096
Status : Answered
Chosen Option : 2

Q.10 Select the word segment that substitutes (replaces) the bracketed word segment correctly and completes the sentence meaningfully. Select the option 'no correction required' if the sentence is correct as given.

This newly arisen (evidence could have proved) to be the final nail in the coffin for the accused.

- Ans
- 1. evidence could have been proved
 - 2. evidence has proof
 - 3. No correction required
 - 4. evidence could prove

Question ID : 59445929085
Status : Answered
Chosen Option : 2

Q.11 Given below are four sentences which are jumbled. Pick the option that gives their correct order.

- A. The truth of the matter is that everyone is so unique that all comparison is utterly wrong - so it is best to be your own self.
- B. It's not your fault because you have been brought up and educated in such a way that you are constantly comparing yourself with others.
- C. For example, someone or other is taller than you, more beautiful, more intelligent or more virtuous and you are always in a state of inferiority and suffering.
- D. These days many of you suffer from an inferiority complex in some way or other, for the simple reason that you go on comparing.

- Ans
- 1. DABC
 - 2. DBCA
 - 3. ABDC
 - 4. ADBC

Question ID : 59445929092
Status : Answered
Chosen Option : 2

Q.12 Fill in the blank with the appropriate word.

The museum is showcasing _____ exhibit of the writer's early works.

- Ans
- 1. a retrospective
 - 2. an extrospective
 - 3. a perspective
 - 4. an erective

Question ID : 59445929086
Status : Answered
Chosen Option : 1

Q.13 Select the word which means the same as the group of given words.

A notice or announcement in a public medium promoting a product, service, or event or publicizing a job vacancy.

- Ans
- 1. Payment
 - 2. Adjustment
 - 3. Advertisement
 - 4. Amazement

Question ID : 59445929095
Status : Answered
Chosen Option : 3

Q.14 Fill in the blank with the appropriate word.

The man was charged with _____ after murdering the king.

- Ans
- 1. homicide
 - 2. regicide
 - 3. matricide
 - 4. genocide

Question ID : 59445929088
Status : Answered
Chosen Option : 1

Q.15 Fill in the blank with the appropriate word.

A _____ tree losses its leaves in autumn and grows new ones in spring.

- Ans
- 1. dividuous
 - 2. residuous
 - 3. assiduous
 - 4. deciduous

Question ID : 59445929089
Status : Answered
Chosen Option : 4

Q.16 Select the most appropriate option to substitute the underlined segment in the given sentence. In case no substitution is needed, select 'No substitution required'.

I would wait for you at the Metro station had I known that you would surely come.

- Ans
- 1. would have waited
 - 2. No substitution required
 - 3. will be waiting
 - 4. shall wait

Question ID : 59445929087
Status : Answered
Chosen Option : 1

Q.17 Select the most appropriate 'one word ' for the expression given below.

A powerful whirlpool in the sea or a river.

- Ans
- 1. Cruciform
 - 2. Maelstrom
 - 3. Lodoform
 - 4. Vasiform

Question ID : 59445929099
Status : Not Answered
Chosen Option : --

Q.18 Select the word segment that substitutes (replaces) the bracketed word segment correctly and completes the sentence meaningfully. Select the option 'no correction required' if the sentence is correct as given.

(Everyone carefully and methodically were trying to) solve the problem given by the boot camp instructor.

- Ans
- 1. Everyone were carefully and methodically trying to
 - 2. Everyone had carefully and methodically trying to
 - 3. No correction required
 - 4. Everyone was carefully and methodically trying to

Question ID : 59445929084
Status : Answered
Chosen Option : 4

Q.19 Select the most appropriate synonym of the given word.

Aggressive

- Ans
- 1. Hostile
 - 2. Vaporous
 - 3. Atmospheric
 - 4. Distinct

Question ID : 59445929093
Status : Answered
Chosen Option : 1

Q.20 Select the most appropriate meaning of the given idiom.

"Might and main"

- Ans
- 1. Approximately, almost, somewhat, to a certain degree
 - 2. Nonsense or meaningless speech
 - 3. With all enthusiasm
 - 4. To keep quiet, To say nothing

Question ID : 59445929100
Status : Answered
Chosen Option : 3



Latest Sarkari jobs, Govt Exam alerts, Results and Vacancies

- ▶ Latest News and Notification
- ▶ Exam Paper Analysis
- ▶ Topic-wise weightage
- ▶ Previous Year Papers with Answer Key
- ▶ Preparation Strategy & Subject-wise Books

To know more [Click Here](#)



www.prepp.in

ACIO Grade II Executive 18th Feb 2021

Participant ID	215515701350
Participant Name	ASLAM ALI
Test Center Name	iON Digital Zone iDZ Borjhar
Test Date	18/02/2021
Test Time :	12:00 PM - 1:00 PM
Subject	ACIO Grade II (Executive)

Section : General awareness Current Affairs

Q.1 On 22nd January 2021, Indian Government launched a portal named "ShramShakti" to collect data related to migrant workers. Which ministry launched this portal along with Goa government?

1. Ministry of Tribal Affairs
2. Ministry of Home affairs
3. Ministry of Minority Affairs
4. Ministry of Electronics and Information Technology

Select the correct answer using the code given below.

- (A) 2 only
(B) 1 only
(C) 3 and 4
(D) 4 only





- Ans  1. A
 2. B
 3. C
 4. D

Question ID : 59445929119

Status : Not Answered

Chosen Option : --

Q.2 Which of the following statement is NOT correct about the Rewa ultra-mega solar power project?

- Ans  1. The Ministry of New and Renewable Energy (MNRE) had approved the project under its solar park scheme
 2. This project is located in Madhya Pradesh state
 3. It was inaugurated on 10 July, 2020
 4. It is solar power project of 850 MW

Question ID : 59445929107

Status : Answered

Chosen Option : 3

Q.3 Match list I with list II and select the correct answer using the code given below the list

List I (Author)	List II (Book)
A. Diane Cook	1. The Shadow King
B. Tsitsi Dangarembga	2. The New Wilderness
C. Maaza Mengiste	3. This Mournable Body
D. Avni Doshi	4. Burnt Sugar

Code

- A) A B C D
 1 3 4 2
- B) A B C D
 2 3 1 4
- C) A B C D
 3 2 1 4
- D) A B C D
 4 3 2 1

- Ans 1. B
 2. D
 3. A
 4. C

Question ID : 59445929116
Status : Not Answered
Chosen Option : --

Q.4 Which of the following institutions was in partnership with the Department of Science & Technology, Government of India has developed a shading system named as "ShadeSmart"?

- Ans 1. The Energy and Resources Institute
 2. Raman Research Institute, Bangalore
 3. Defence Research and Development Organization
 4. Centre for Nano and Soft Matter Sciences, Bangalore

Question ID : 59445929108
Status : Not Answered
Chosen Option : --

Q.5 In July, 2020 Cochin Shipyard Limited (CSL), Kochi signed contracts for construction and supply of two autonomous electric ferries for _____ based company ASKO Maritime AS.

- Ans 1. France
 2. Portugal
 3. Israel
 4. Norway

Question ID : 59445929110
Status : Answered
Chosen Option : 1

Q.6 Consider the statement in regard "Special Assistance to States for Capital Expenditure".

1. The Finance Ministry has approved Rs 9,879.61 crore worth capital expenditure proposals of 27 states.
2. All states, except Tamil Nadu, have availed benefits of 'Special Assistance to States for Capital Expenditure'.

Select the correct answer by using the code mentioned below.

- Ans
- 1. Both 1 and 2
 - 2. Only 2
 - 3. Only 1
 - 4. Neither 1 nor 2

Question ID : 59445929117

Status : Not Answered

Chosen Option : --

Q.7 The Government of India (GoI) is introducing adoption of E20 fuel.

1. To promote green fuel like ethanol.
2. To Adopt E20 fuel with blending of 45 percent of ethanol with gasoline as an automotive fuel.
3. To reduce emissions of carbon dioxide and hydrocarbons.

Select the correct answer by using the code mentioned below.

- Ans
- 1. Only 2
 - 2. Both 1 and 2
 - 3. Only 1
 - 4. Both 1 and 3

Question ID : 59445929114

Status : Not Answered

Chosen Option : --

Q.8 In August 2020, Narendra Singh Tomar has launched the Integration of ICAR-IIHR Seed Portal with YONO Krishi Web Application of:

- Ans
- 1. SBI
 - 2. HDFC
 - 3. Axis
 - 4. ICICI

Question ID : 59445929103

Status : Answered

Chosen Option : 1

Q.9 Which of the following statements are correct in regard of The Ramanujan Prize for Young Mathematicians 2020.

1. It has been awarded to Carolina Araujo,
2. She is the first non-Indian to receive this prize.

Select the correct answer by using the code mentioned below.

- Ans
- 1. Neither 1 nor 2
 - 2. Both 1 and 2
 - 3. Only 1
 - 4. Only 2

Question ID : 59445929111
Status : Not Answered
Chosen Option : --

Q.10 Consider the statement in regard of SVAMITVA scheme.

1. The aim of this scheme is to update rural land records, providing record of rights to village households and issue property cards.
2. SVAMITVA is a central scheme of the Ministry of Panchayati Raj and Rural Development.
3. This scheme to be implemented across the country in a phased manner over the period of six years (2020-2026).

Select the correct answer by using the code mentioned below.

- Ans
- 1. Only 1 and 2
 - 2. All 1,2 and 3
 - 3. Only 1 and 3
 - 4. Only 2 and 3

Question ID : 59445929120
Status : Not Answered
Chosen Option : --

Q.11 In August 2020, Pradhan Mantri Jan-Dhan Yojana has completed:

- Ans
- 1. 6 years
 - 2. 7 years
 - 3. 5 years
 - 4. 4 years

Question ID : 59445929104
Status : Answered
Chosen Option : 3

Q.12 13-year-old student, Freya Thakral has received the 2020 Diana Award for her:

- Ans
- 1. Reconstruct App
 - 2. Reuse App
 - 3. Rejoin App
 - 4. Recycler App

Question ID : 59445929106

Status : Answered

Chosen Option : 4

Q.13 On 17th March 2020, Ministry of Science & Technology said that the Scientists from the Institute of Nano Science and Technology (INST) had developed a material called 'hemostat' that concentrates the natural clotting factors in blood by physically absorbing excess fluid. The product is mainly made up of which biodegradable materials?

- 1. Polythene film
- 2. Starch
- 3. Synthetic polymer

Select the correct answer using the code given below.

- (A) 1 only
- (B) Both 1 and 2
- (C) 2 only
- (D) both 2 and 3

- Ans
- 1. D
 - 2. A
 - 3. C
 - 4. B

Question ID : 59445929118

Status : Not Answered

Chosen Option : --

Q.14 Which of the following statements is /are correct in the context of The Jammu and Kashmir Official Languages Bill, 2020.

- 1. The Bill was for the inclusion of Kashmiri, Dogri and Hindi in the list of official languages in the Union Territory of Jammu and Kashmir.
- 2. The Bill is for the inclusion of Urdu and English in the list of official languages in the Union Territory of Jammu and Kashmir.

Select the correct answer by using the code mentioned below.

- Ans
- 1. Only 2
 - 2. Only 1
 - 3. Neither 1 nor 2
 - 4. Both 1 and 2

Question ID : 59445929113

Status : Not Answered

Chosen Option : --

Q.15 Who among the following received the Padma Bhushan Award 2019 in the field of Trade & Industry-Technology?

- Ans
- 1. Shri Sukhdev Singh Dhindsa
 - 2. Shri Darshan Lal Jain
 - 3. Shri Pravin Gordhan
 - 4. Shri John Chambers

Question ID : 59445929101
Status : Not Answered
Chosen Option : --

Q.16 Which organization had appointed the Election Commissioner, Mr. Ashok Lavasa, as its vice president in July 2020?

- Ans
- 1. UNHCR
 - 2. World Bank
 - 3. UNICEF
 - 4. Asian Development Bank

Question ID : 59445929102
Status : Answered
Chosen Option : 2

Q.17 Consider the statement in regard of National Centre for Divyang Empowerment.

1. National Centre for Divyang Empowerment (NCDE) shall provide facility for training the CRPF personnel who suffer injuries and become physically challenged
2. National Centre for Divyang Empowerment (NCDE) will assist the needy disabled persons by providing concessional loan for economic and overall empowerment.

Select the correct answer by using the code mentioned below.

- Ans
- 1. Only 1
 - 2. Both 1 and 2
 - 3. Only 2
 - 4. Neither 1 nor 2

Question ID : 59445929115
Status : Not Answered
Chosen Option : --

Q.18 Who has been appointed as honorary adviser for BRICS CCI in July 2020?

- Ans
- 1. Sahil Seth
 - 2. Injeti Srinivas
 - 3. Arun Kumar
 - 4. Indra Mani Pandey

Question ID : 59445929109
Status : Not Answered
Chosen Option : --

Q.19 In August 2020, which organization has partnered with Ericsson to map school internet connectivity?

- Ans
- 1. UNICEF
 - 2. UNHCR
 - 3. UNESCO
 - 4. UNDP

Question ID : 59445929105

Status : Not Answered

Chosen Option : --

Q.20 Which of the following statement in the context of Tony Lewis is/ are correct?

1. He is one of the men behind the Duckworth-Lewis-Stern (DLS) method used in weather-affected limited-overs matches.
2. He received an MBE (Member of the Order of the British Empire) for his services.

Select the correct answer by using the code mentioned below.

- Ans
- 1. Only 2
 - 2. Both 1 and 2
 - 3. Only 1
 - 4. Neither 1 nor 2

Question ID : 59445929112

Status : Not Answered

Chosen Option : --

Section : General studies

Q.1 Consider the following statements regarding musicians and their instruments.

1. Ramnad V Raghavan was a Chennai-based musician who played Mridangam.
2. Ustad Asad Ali Khan was a famous active Rudra Veena player and the master of one of the four schools of 'Dhrupad', the Khander School.
3. Pandit Shiv Kumar Sharma, a famous santoor player, was awarded with Padma Vibhushan in 2005.
4. Thetakudi Harihara Vinayakram is an Indian percussionist who plays Carnatic music with Ghatam and is known as the God of Ghatam.

Which of the statements given above is/are correct?

- Ans
- 1. Only 1 and 2
 - 2. Only 2 and 3
 - 3. Only 1, 2 and 3
 - 4. Only 1, 2 and 4

Question ID : 59445929137

Status : Not Answered

Chosen Option : --

Q.2 A river drains the water collected from a specific area, is known as?

- Ans
- 1. Dentritic area
 - 2. Catchment area
 - 3. Watershed
 - 4. Drainage Basin

Question ID : 59445929126
Status : Not Answered
Chosen Option : --

Q.3 Consider the following statements with reference to sanitation in Budget 2020.

1. ₹ 3.6 lakh crore were allocated for Jal Jeevan Mission.
2. ₹ 12,300 crore were allocated for Swachh Bharat Mission.

Which of the statements given above is/are correct?

- Ans
- 1. Only 1
 - 2. Only 2
 - 3. Both 1 and 2
 - 4. Neither 1 nor 2

Question ID : 59445929132
Status : Not Answered
Chosen Option : --

Q.4 Consider the following statements in the context of the Indian Independence League.

1. It was a political organisation founded by Indian nationalists to foster Indian nationalism and obtain Japanese support for the Indian independence movement.
2. Founded in 1928, the organisation was located in various parts of South-East Asia.

Which of the statements given above is/are correct?

- Ans
- 1. Only 1
 - 2. Both 1 and 2
 - 3. Neither 1 nor 2
 - 4. Only 2

Question ID : 59445929131
Status : Not Answered
Chosen Option : --

Q.5 The Kanger Valley National Park is located in which of the following states?

- Ans
- 1. Gujarat
 - 2. Arunachal Pradesh
 - 3. Chhattisgarh
 - 4. Assam

Question ID : 59445929130
Status : Not Answered
Chosen Option : --

Q.6 Which of the following methods is/are used for covering the soil around plants with organic wastes?

- 1. Staking
- 2. Mulching
- 3. Pruning

Select the correct answer using the codes given below.

- Ans
- 1. Only 1
 - 2. Only 1 and 2
 - 3. Only 3
 - 4. Only 2

Question ID : 59445929139
Status : Not Answered
Chosen Option : --

Q.7 The Chinese traveller Huien Tsang visited India during which king's rule?

- Ans
- 1. Pulakesin
 - 2. Harshvardhana
 - 3. Rajavardhana
 - 4. Kirtivarman

Question ID : 59445929123
Status : Not Answered
Chosen Option : --

Q.8 Who was the first winner of the Pro Kabaddi League?

- Ans
- 1. Bengaluru Bulls
 - 2. Patna Pirates
 - 3. Bengal Warriors
 - 4. Jaipur Pink Panthers

Question ID : 59445929124
Status : Not Answered
Chosen Option : --

Q.9 Who among the following was the first person to be awarded the Arjuna Award for Archery?

- Ans
- 1. Baba Sravan Kishore
 - 2. Harish Nangunuri
 - 3. Krishna Das
 - 4. Sanjeev Kumar Singh

Question ID : 59445929129
Status : Not Answered
Chosen Option : --

Q.10 Which of the following pair of festival – state is correct?

- I. Modhera Dance Festival – Gujarat
- II. Baneshwar Fair – Rajasthan

- Ans
- 1. Both I and II
 - 2. Only II
 - 3. Neither I nor II
 - 4. Only I

Question ID : 59445929121
Status : Not Answered
Chosen Option : --

Q.11 Match List-I with List-II and select the correct answer using the codes given below the Lists.

List-I (Traditional sports)	List-II (States in which they are played)
A. Kalaripayattu	1. Tamil Nadu
B. Archery	2. Kerala
C. Jallikattu	3. Madhya Pradesh
D. Mallakhamb	4. Manipur

- Ans
- 1. A-2, B-1, C-3, D-4
 - 2. A-2, B-4, C-1, D-3
 - 3. A-2, B-3, C-1, D-4
 - 4. A-2, B-1, C-4, D-3

Question ID : 59445929134
Status : Not Answered
Chosen Option : --

Q.12 Which gas has been detected in large amount by NASA'S Curiosity rover on Mars?

- Ans
- 1. Hydrogen
 - 2. Sulphur
 - 3. Methane
 - 4. Nitrogen

Question ID : 59445929122
Status : Not Answered
Chosen Option : --

Q.13 ISWM stands for _____.

- Ans**
- 1. Integrated Solid Waste Ministry
 - 2. Integrated Sanitation and Waste Management
 - 3. Integrated Solid Waste Management
 - 4. Integrated Sanitation Waste Ministry

Question ID : **59445929125**
Status : **Not Answered**
Chosen Option : --

Q.14 Consider the following statements regarding Jal Jeevan Mission.

1. It aims to provide piped drinking water to all rural households by 2024.
2. It aims to provide 25 litres of tapped water per person per day to all households by 2024.
3. Goa has become the first 'Har Ghar Jal State' to provide 100% household tap connections in rural areas.
4. The Jal Shakti Ministry is the nodal ministry for the implementation of the scheme.

Which of the statements given above is/are correct?

- Ans**
- 1. Only 1 and 2
 - 2. Only 1, 2 and 3
 - 3. Only 1, 3 and 4
 - 4. Only 1 and 3

Question ID : **59445929138**
Status : **Not Answered**
Chosen Option : --

Q.15 'Kambala' is an annual buffalo race held in _____.

- Ans**
- 1. Haryana
 - 2. Kerala
 - 3. Assam
 - 4. Karnataka

Question ID : **59445929128**
Status : **Not Answered**
Chosen Option : --

Q.16 Match List-I with List-II and select the correct answer using the codes given below the Lists.

List-I (Mesolithic Sites)	List-II (Locations)
A. Langhnaj	1. Telangana
B. Sanganakallu	2. Karnataka
C. Gauri Gundam	3. Uttar Pradesh
D. Chopani Mando	4. Gujarat

- Ans**
- 1. A-3, B-1, C-4, D-2
 - 2. A-3, B-1, C-2, D-4
 - 3. A-4, B-2, C-1, D-3
 - 4. A-2, B-1, C-3, D-4

Question ID : 59445929136

Status : Not Answered

Chosen Option : --

Q.17 Consider the following statements in reference to Qara Tagh Pass.

1. It is located in the state of Arunachal Pradesh.
2. It is an offshoot of the Great Silk Road and is situated in the Karakoram Mountains.
3. It connects Arunachal Pradesh with Tibet.

Which of the statements given above is/are correct?

- Ans**
- 1. Only 1 and 2
 - 2. Only 2
 - 3. Only 1
 - 4. Only 3

Question ID : 59445929135

Status : Not Answered

Chosen Option : --

Q.18 In which year was the Local Area Bank (LAB) Scheme introduced?

- Ans**
- 1. 1994
 - 2. 1996
 - 3. 1993
 - 4. 1995

Question ID : 59445929127

Status : Not Answered

Chosen Option : --

Q.19 Consider the following statements with reference to Wilhelm Conrad Rontgen.

1. He was the recipient of the first Nobel Prize for Physics in 1901.
2. His discovery of X-rays that revolutionised the fields of physics and medicine.
3. He discovered diffraction of sound waves.

Which of the statements given above is/are correct?

- Ans**
- 1. Only 1
 - 2. Only 1 and 2
 - 3. Only 1 and 3
 - 4. Only 2

Question ID : 59445929133
Status : Not Answered
Chosen Option : --

Q.20 Which of the following is/are NOT a non-justifiable right?

1. Right to work
2. Equal pay for equal work (for men and women)
3. Right to education

Select the correct answer using the codes given below.

- Ans**
- 1. Only 1 and 2
 - 2. Only 2 and 3
 - 3. Only 1 and 3
 - 4. Only 1, 2 and 3

Question ID : 59445929140
Status : Not Answered
Chosen Option : --

Section : Numerical aptitude

Q.1 Sita travels 5 km to her school everyday by bicycle. She leaves her house at 7:00 am and reaches at 7:30 am. Find her speed?

- Ans**
- 1. 8 km/hr
 - 2. 5 km/hr
 - 3. 20 km/hr
 - 4. 10 km/hr

Question ID : 59445929147
Status : Answered
Chosen Option : 4

Q.2 If $768.792 \div 0.00823 = a$, then find the value of $768792 \div 0.00823 = ?$

- Ans
- 1. $10a$
 - 2. $a+1000$
 - 3. $1000a$
 - 4. $a+100$

Question ID : 59445929151
Status : Answered
Chosen Option : 3

Q.3 The lateral area is thrice as big as the base area of a solid cone. If the diameter of the solid cone is 1 meter, then what is the total surface area of solid cone?

- Ans
- 1. 8π Sq. m.
 - 2. 2π Sq. m.
 - 3. π Sq. m
 - 4. 4π Sq. m.

Question ID : 59445929157
Status : Not Answered
Chosen Option : --

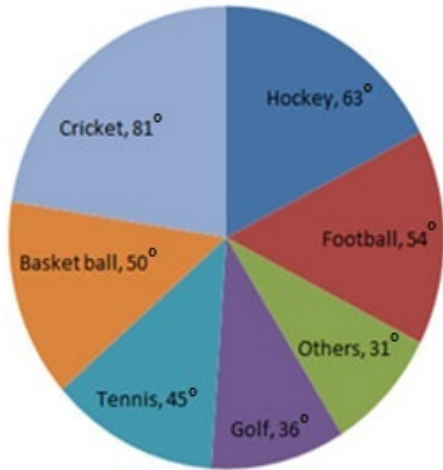
Q.4 What value will come in place of question mark (?) in the following equation?

$$\frac{40}{2} + 13 \times 4 = ? + \frac{60}{3} - 33$$

- Ans
- 1. 85
 - 2. 89
 - 3. 79
 - 4. 97

Question ID : 59445929154
Status : Answered
Chosen Option : 1

Q.5 The circle-graph given here shows the spendings of a country on various sports during a particular year. Study the graph carefully and answer the questions given below it.



If the total amount spent on sports during the year was Rs. 2 crore, the amount spent on Cricket and Hockey together was :

- Ans
- 1. Rs. 800000
 - 2. Rs. 12000000
 - 3. Rs. 8000000
 - 4. Rs. 16000000

Question ID : 59445929156
Status : Answered
Chosen Option : 3

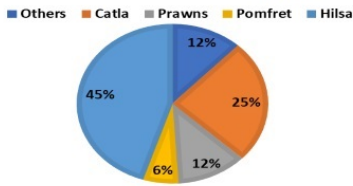
Q.6 When 65 percent of a number is subtracted from itself, then the result becomes square root of 784. What is the number?

- Ans
- 1. 96
 - 2. 56
 - 3. 64
 - 4. 80

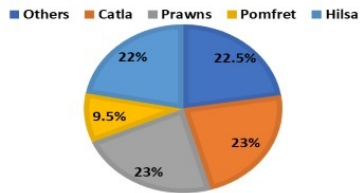
Question ID : 59445929160
Status : Answered
Chosen Option : 4

Q.7 The following pie charts show the income and profit earned by selling different types of seafood by Koliwada seafood centre in Mumbai for the year 2012-13.

SHARE OF NET INCOME BY SELLING EACH TYPE OF SEAFOOD



SHARE OF NET PROFIT BY SELLING EACH TYPE OF SEAFOOD



If the total income of the seafood centre in the year 2012-13 is ₹ 31,25,000 and the total profit of the company is ₹ 6,00,000, then the profit by selling which type of seafood was maximum for per rupee of income?

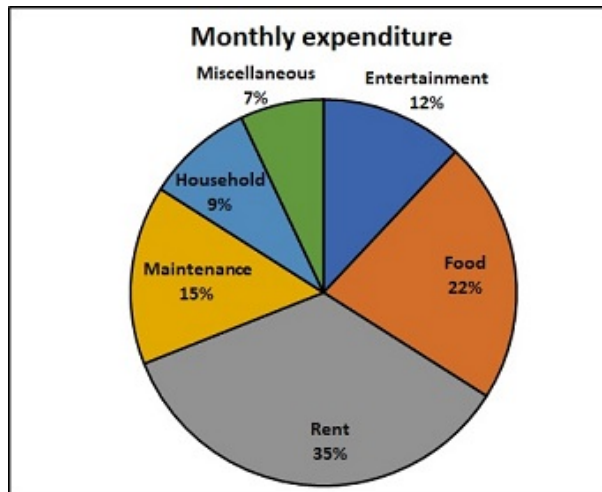
- Ans
- 1. Catla
 - 2. Others
 - 3. Pomfret
 - 4. Prawns

Question ID : 59445929149

Status : Not Attempted and Marked For Review

Chosen Option : --

Q.8 The pie chart shows monthly expenditure of Suresh on various items. If he has to pay Rs. 70000 as rent, then calculate the amount spent on entertainment.



- Ans
- 1. Rs. 8000
 - 2. Rs. 24000
 - 3. Rs. 35000
 - 4. Rs. 12000

Question ID : 59445929143
Status : Answered
Chosen Option : 2

Q.9 Selling Price of 5 oranges = Cost Price of 8 oranges. Find the profit/loss percentage.

- Ans
- 1. 60 percent
 - 2. 30 percent
 - 3. 10 percent
 - 4. 25 percent

Question ID : 59445929141
Status : Not Attempted and Marked For Review
Chosen Option : --

Q.10 If length and breadth of a rectangle are increased and decreased by 10 percent respectively, then what is the percentage change in the area of rectangle?

- Ans
- 1. No change
 - 2. 1 percent
 - 3. 0.1 percent
 - 4. 10 percent

Question ID : 59445929146
Status : Not Attempted and Marked For Review
Chosen Option : --

Q.11 Find the area of a sphere whose radius is 7 cm. (The value of π is $\frac{22}{7}$)

- Ans
- 1. 225 cm^2
 - 2. 616 cm^2
 - 3. 144 cm^2
 - 4. 729 cm^2

Question ID : 59445929142
Status : Answered
Chosen Option : 2

Q.12 Find the area of a trapezium whose parallel sides have lengths of 12 cm and 18 cm respectively and the shortest distance between them is 20 cm.

- Ans
- 1. 600 cm^2
 - 2. 195 cm^2
 - 3. 300 cm^2
 - 4. 210 cm^2

Question ID : 59445929155
Status : Not Answered
Chosen Option : --

Q.13 Two students appeared at an examination. One of them secured 15 marks more than the other and his marks were 55% of the sum of their marks. The marks obtained by them are:

- Ans
- 1. 73.5, 88.5
 - 2. 40, 60
 - 3. 67.5, 82.5
 - 4. 53, 68

Question ID : 59445929152
Status : Not Answered
Chosen Option : --

Q.14 If 20 men working 5 hours a day complete a work in 4 days. Then in how many days will 10 men working 10 hours a day finish the same work? Assume that all men work at same efficiency.

- Ans
- 1. 5 days
 - 2. 40 days
 - 3. 4 days
 - 4. 2 days

Question ID : 59445929145
Status : Answered
Chosen Option : 3

Q.15 L.C.M. of two numbers is 12 time their H.C.F. The sum of H.C.F. and L.C.M. is 403. If one of the numbers is 124, then find the other number.

- Ans
- 1. 112
 - 2. 76
 - 3. 64
 - 4. 93

Question ID : 59445929158

Status : **Not Attempted and Marked For Review**

Chosen Option : --

Q.16 Two friends A and B went to fruit market to buy some fruits. At first shop B bought some mangoes at ₹ a per mango and A bought 9 mangoes more than B. At the next shop A bought some apples at a unit price of ₹ b per apple and B bought 18 apples more than A. Later, it was found that the ratio of number of fruits bought by A and B is 4 : 7, respectively, whereas the amounts of money spent by them to buy fruits are the same. Find the ratio a : b.

- Ans
- 1. 2 : 1
 - 2. 2 : 3
 - 3. 3 : 2
 - 4. 1 : 2

Question ID : 59445929150

Status : **Not Answered**

Chosen Option : --

Q.17 The average of first 6 positive multiples of 6 will be _____.

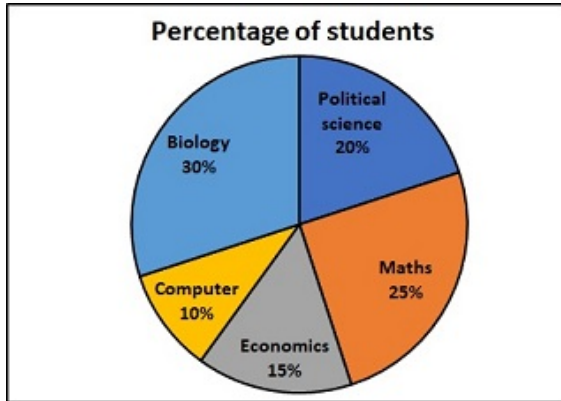
- Ans
- 1. 6
 - 2. 126
 - 3. 21
 - 4. 12

Question ID : 59445929144

Status : **Answered**

Chosen Option : 3

Q.18 The given pie chart shows percentage of students who opted for different subjects as additional subject.
If total number of students in the college is 5000, find the number of students who opted for maths or economics.



- Ans
- 1. 1000
 - 2. 3000
 - 3. 2000
 - 4. 2500

Question ID : 59445929153
Status : Answered
Chosen Option : 3

Q.19 A, B and C can do a work on their own in 5, 10 and 15 days respectively. Calculate the time required by B and C to do it together.

- Ans
- 1. 12 days
 - 2. 8 days
 - 3. 5 days
 - 4. 6 days

Question ID : 59445929148
Status : Answered
Chosen Option : 4

Q.20 A certain sum of money amounts to Rs. 1250 in 3 years and Rs. 1600 in 8 years at simple interest. Find the sum.

- Ans
- 1. 1100
 - 2. 1040
 - 3. 1050
 - 4. 1024

Question ID : 59445929159
Status : Answered
Chosen Option : 2

Section : Reasoning Logical aptitude

Q.1 Find the missing term in the following number series.

2,6,12,20,_____,42

- Ans
- 1. 36
 - 2. 32
 - 3. 34
 - 4. 30

Question ID : 59445929164

Status : Answered

Chosen Option : 4

Q.2 In the question one statement is given, followed by two conclusions, I and II. You have to consider the statement to be true even if it seems to be at variance from commonly known facts. You have to decide which of the given conclusions, if any, follows from the given statement.

Statement: A function is a relation between a set of input elements and a set of possible output elements where each input is related to exactly one output.

Conclusion I : Every input element is related to every output element.

Conclusion II: Every input element is related to one element of output.

- Ans
- 1. Only conclusion I follows
 - 2. Only conclusion II follows
 - 3. Neither I nor II follows
 - 4. Both I and II follows

Question ID : 59445929161

Status : Answered

Chosen Option : 2

Q.3 In a certain code language, MALE is written as 2375 and CIRCULAR is written as 98496734 then how can CLAIM be written in that code language?

- Ans
- 1. 87342
 - 2. 97384
 - 3. 97382
 - 4. 67382

Question ID : 59445929168

Status : Not Attempted and
Marked For Review

Chosen Option : --

Q.4 In a row of Cars, Maruti is 8th from the left and Toyota is 17th from the right. If they interchange their positions, Maruti becomes 14th from left. How many Cars are there in the row?

- Ans
- 1. 28
 - 2. 30
 - 3. 32
 - 4. 25

Question ID : 59445929175

Status : **Not Attempted and Marked For Review**

Chosen Option : --

Q.5 Select the option that is related to the third term on the same basis as the second term is related to the first term.

ABROAD : ZCPQXG :: MARKET : ?

- Ans
- 1. LBPMBW
 - 2. LBPLCV
 - 3. LBTMBW
 - 4. LBQNCW

Question ID : 59445929167

Status : **Not Attempted and Marked For Review**

Chosen Option : --

Q.6 Select the option that is related to the third term on the same basis as the second term is related to the first term.

Zeal : Enthusiasm :: Abduct : ?

- Ans
- 1. Abrupt
 - 2. Realise
 - 3. Kidnap
 - 4. Freedom

Question ID : 59445929165

Status : **Answered**

Chosen Option : 3

Q.7 In a warehouse, to keep 5 boxes A to E exactly one above the other, the following conditions are given:

1. Box A should be placed exactly three places above the box D.
2. Box C should not be kept on the top.
3. Only one box should be kept between the box E and box B.

If box E is at the bottom, then what is the position of box C from the top?

- Ans
- 1. 2nd
 - 2. Inadequate data
 - 3. 4th
 - 4. 3rd

Question ID : 59445929174
Status : Answered
Chosen Option : 1

Q.8 In certain code, WHISPER is written as IHWSREP, in that code, how will COLLECT be written?

- Ans
- 1. LOCTLEC
 - 2. LOCTLCE
 - 3. LCOLTCE
 - 4. LOCLTCE

Question ID : 59445929178
Status : Answered
Chosen Option : 4

Q.9 Find the missing term in the following series.

HS10, KP4, NM0, ____

- Ans
- 1. QJ6
 - 2. QJ5
 - 3. UF14
 - 4. QK5

Question ID : 59445929166
Status : Not Attempted and Marked For Review
Chosen Option : --

Q.10 In the question two statements are given, followed by two conclusions, I and II. You have to consider the statements to be true even if it seems to be at variance from commonly known facts. You have to decide which of the given conclusions, if any, follows from the given statements.

Statements:

1. No plant is a fruit.
2. All biscuits are plants.

Conclusions:

- I. Some plants are biscuits.
- II. No biscuit is a fruit.

- Ans**
- 1. Neither conclusion I nor II follows.
 - 2. Only conclusion II follows.
 - 3. Both conclusions I and II follow.
 - 4. Only conclusion I follows.

Question ID : 59445929171

Status : Answered

Chosen Option : 3

Q.11 In the question two statements are given, followed by two conclusions, I and II. You have to consider the statements to be true even if it seems to be at variance from commonly known facts. You have to decide which of the given conclusions, if any, follows from the given statements.

Statement 1 : Some wood is furniture.

Statement 2 : Some Furniture is iron.

Conclusion I : All furniture is Wood.

Conclusion II : All wood is Iron.

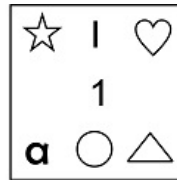
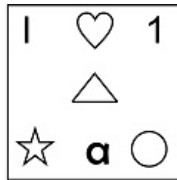

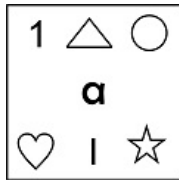
- Ans**
- 1. Only conclusion I follows
 - 2. Only conclusion II follows
 - 3. Both I and II follows
 - 4. Neither I nor II follows

Question ID : 59445929173

Status : Answered

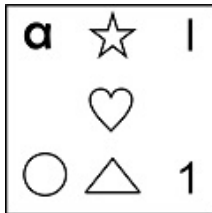
Chosen Option : 4

Q.12 From the given question, find which figure comes after the four figures which are in series?

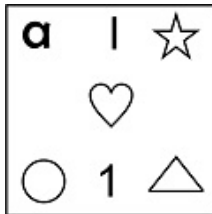


Ans


✓ 1.




✗ 2.



✗ 3.



✗ 4.

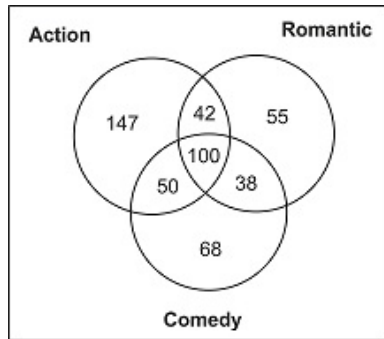


Question ID : 59445929170

Status : Answered

Chosen Option : 1

Q.13 The diagram given below shows the results of a survey on a sample of 500 students with reference to their interest in different types of movies viz. Action, Romantic, and Comedy. If all the students like at least one of three types of movies, then the number of students who like Action movies is how much more than those who like Comedy movies?



- Ans
- 1. 143
 - 2. 83
 - 3. 98
 - 4. 147

Question ID : 59445929169
 Status : Answered
 Chosen Option : 2

Q.14 Which two numbers should be interchanged to make the given equation correct?

$$700 + 42 \div 6 \times 45 - 54 \times 9 + 14 = 355$$

- Ans
- 1. 9 and 14
 - 2. 6 and 14
 - 3. 6 and 9
 - 4. 45 and 54

Question ID : 59445929176
 Status : Not Attempted and Marked For Review
 Chosen Option : --

Q.15 Pointing to a girl Abhay said, she is my father-in-law's wife's only daughter's daughter. How is that girl related to Abhay?

- Ans
- 1. Sister
 - 2. Niece
 - 3. Daughter-in-law
 - 4. Daughter

Question ID : 59445929162
 Status : Answered
 Chosen Option : 4

Q.16 Which of the answer figures is the exact mirror image of the given problem figure when the mirror is held at the right side?

Problem figure:



Ans

1.



2.



3.



4.



Question ID : 59445929180

Status : Answered

Chosen Option : 2

Q.17 In the following equation, which of the two signs will be interchanged to get the correct equation?

$$119 - 21 \div 7 + 117 \times 3 = 11$$

Ans 1. - and +

2. - and ×

3. + and ×

4. + and +

Question ID : 59445929172

Status : Answered

Chosen Option : 3

Q.18 'P + Q' means 'P is the wife of Q', 'P - Q' means 'P is the father of Q', 'P × Q' means 'P is the daughter of Q', and 'P ÷ Q' means 'P is the son of Q'.

If S is the sister of V, which of the following equations is correct?

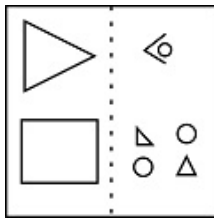
- Ans
- 1. $R \times S \div T + U - V$
 - 2. $S \div R \times T + U - V$
 - 3. $S \times R \div T + U - V$
 - 4. $R \div S \times T + U - V$

Question ID : 59445929179

Status : **Not Attempted and Marked For Review**

Chosen Option : --

Q.19 A transparent sheet with a pattern is given. Choose from the four alternatives as to how the pattern would appear when the transparent sheet is folded at the dotted line.



Ans

- 1.
- 2.
- 3.
- 4.

Question ID : 59445929163

Status : **Answered**

Chosen Option : 2

Q.20 In the following question, select the related letters from the given alternatives.

WKDL : XIGH :: DIHS : ?

- Ans
- 1. OEGE
 - 2. GEKO
 - 3. EGKO
 - 4. OGGK

Question ID : 59445929177
Status : Answered
Chosen Option : 3

Section : English

Q.1 The question below consists of a set of labelled sentences. Out of four options given, select the most logical order of the sentences which forms a coherent paragraph.

We know that dogs are a human's best friend.

P. They love us and we love them.

Q. Although wolves are wild and dogs are tame, they're still a lot alike.

R. Many scientists think they came from wolves 15,000 years ago.

S. Both wag their tails when happy and put their tails between their legs when scared.

These similarities today depict the relationship which they built with humans over 15,000 years ago.

- Ans
- 1. PQRS
 - 2. PRQS
 - 3. PRSQ
 - 4. PSQR

Question ID : 59445929188
Status : Not Answered
Chosen Option : --

Q.2 Select the most appropriate synonym of the given word.

PERISH

- Ans
- 1. Toil
 - 2. Despair
 - 3. Vacuum
 - 4. Die

Question ID : 59445929193
Status : Answered
Chosen Option : 2

Q.3 Some parts of a sentence have been jumbled up, and labelled P, Q, R and S. Select the option that gives the correct sequence in which these parts can be rearranged to form a meaningful and grammatically correct sentence.

The dualism characteristic of medieval serfdom,

P. may be traced all through

Q. its formation out of debased

R. freedom and rising servitude,

S. the history of the

middle ages.

- Ans 1. QRPS
 2. PSQR
 3. RPQS
 4. QSPR

Question ID : 59445929189
Status : Not Answered
Chosen Option : --

Q.4 Select the most appropriate 'one word ' for the expressions given below.

Done, occurring, or active at night.

- Ans 1. Nocturnal
 2. Cothurn
 3. Adjournal
 4. Diuturnal

Question ID : 59445929196
Status : Answered
Chosen Option : 1

Q.5 Identify the segment in the sentence which contains a grammatical error.

Prior to this assignment, he work as an officer in the accounts department.

- Ans 1. he work
 2. as an officer
 3. Prior to this assignment
 4. in the accounts department

Question ID : 59445929182
Status : Answered
Chosen Option : 1

Q.6 Fill in the blank with the appropriate word.

While it is undeniable that I have enjoyed living as _____ in the States, I would like to return home now.

- Ans
- 1. a depatriate
 - 2. a repatriate
 - 3. an expatriate
 - 4. a patriate

Question ID : 59445929187
Status : Answered
Chosen Option : 4

Q.7 Four words are given, out of which only one word is spelt correctly. Choose the word with the correct spelling.

- Ans
- 1. Exacarbate
 - 2. Execerbate
 - 3. Exacarbete
 - 4. Exacerbate

Question ID : 59445929200
Status : Not Answered
Chosen Option : --

Q.8 Select the most appropriate option to substitute the underlined segment in the given sentence. If there is no need to substitute it, select 'No improvement'.

If you want to grow, you must apply in whatever you do.

- Ans
- 1. should applied in
 - 2. must apply yourself to
 - 3. No improvement
 - 4. ought to apply yourselves in

Question ID : 59445929186
Status : Answered
Chosen Option : 2

Q.9 Select the word that is closest in meaning (SYNONYM) to the word given below.

Vandalize

- Ans
- 1. Desecrate
 - 2. Ascertain
 - 3. Commemorate
 - 4. Venerate

Question ID : 59445929197
Status : Answered
Chosen Option : 1

Q.10 Select the word that is opposite in meaning (ANTONYM) to the word given below.

Avert

- Ans 1. Thwart
 2. Assist
 3. Elude
 4. Compensate

Question ID : 59445929195
Status : Answered
Chosen Option : 3

Q.11 In the following question, some parts of the sentence may have errors. Select the option that has the error. If the sentence has no error then select 'No Error'.

The number of people on the planet still poses to a significant challenge for the countries struggling to provide a basic standard of living for everyone.

- Ans 1. still poses to a significant challenge for the countries
 2. No Error
 3. struggling to provide a basic standard of living for everyone.
 4. The number of people on the planet

Question ID : 59445929184
Status : Answered
Chosen Option : 1

Q.12 In the following question, some parts of the sentence may have errors. Select the option that has the error. If the sentence has no error then select 'No Error'.
After a stay of several years abroad he has returned back to Delhi.

- Ans 1. to Delhi.
 2. No error
 3. After a stay of several years abroad
 4. he has returned back

Question ID : 59445929181
Status : Answered
Chosen Option : 3

Q.13 The sentence below has been divided into three parts. Select the part of the sentence that has an error. If the sentence has no error, select the option 'No Error'.

- Ans 1. I like to tune into the live sessions
 2. of popular chess streams, every
 3. once in a while.
 4. No error

Question ID : 59445929185
Status : Answered
Chosen Option : 1

Q.14 Select the most appropriate antonym of the given word.

Dilatory

- Ans 1. Unhurried
 2. Postponing
 3. Prompt
 4. Idle

Question ID : 59445929198
Status : Not Answered
Chosen Option : --

Q.15 Identify the segment in the sentence which contains a grammatical error.

If I was in his shoes, I would not have hesitated to take up the offer.

- Ans 1. would not have hesitated
 2. If I was
 3. in his shoes
 4. to take up the offer

Question ID : 59445929183
Status : Answered
Chosen Option : 2

Q.16 Select the most appropriate meaning of the given idiom.

"Haste makes waste"

- Ans 1. Should, ought to, be advisable to
 2. Angry and overcome by emotions
 3. Doing things quickly result in a poor ending
 4. Intelligent people think like each other

Question ID : 59445929192
Status : Not Answered
Chosen Option : --

Q.17 Select the most appropriate 'one word ' for the expression given below.

Self-pityingly or tearfully sentimental.

- Ans 1. Cisplatin
 2. Maudlin
 3. Codlin
 4. Myelin

Question ID : 59445929199
Status : Not Answered
Chosen Option : --

Q.18 Given below are four parts of a sentence which are jumbled. Pick the option that gives their correct order to make a grammatically correct, meaningful sentence.

- A. that they got from the grapevine
- B. the employees of the MNC were on tenterhooks all day
- C. and their nervousness could be seen on their faces
- D. having heard rumours of mass transfers

- Ans
- 1. BCDA
 - 2. DBAC
 - 3. DABC
 - 4. BDCA

Question ID : 59445929190
Status : Not Answered
Chosen Option : --

Q.19 Four words are given, out of which only one word is spelt correctly. Choose the word with the correct spelling.

- Ans
- 1. Fillicious
 - 2. Fallacious
 - 3. Fallicious
 - 4. Fillacious

Question ID : 59445929194
Status : Answered
Chosen Option : 3

Q.20 Select the most appropriate option to substitute the underlined segment in the given sentence. In case no substitution is needed, select 'No substitution required'.

I requested the audience to refrain from speaking during the show.

- Ans
- 1. to restrain to
 - 2. to restrict them for
 - 3. No substitution required
 - 4. to remain away from

Question ID : 59445929191
Status : Answered
Chosen Option : 3



Latest Sarkari jobs, Govt Exam alerts, Results and Vacancies

- ▶ Latest News and Notification
- ▶ Exam Paper Analysis
- ▶ Topic-wise weightage
- ▶ Previous Year Papers with Answer Key
- ▶ Preparation Strategy & Subject-wise Books

To know more [Click Here](#)



www.prepp.in

ACIO Grade II Executive 19th Feb 2021

Participant ID	520427200187
Participant Name	ASHISH KUMAR SINGH
Test Center Name	S.P. Education Institute of IT & Management
Test Date	19/02/2021
Test Time :	12:00 PM - 1:00 PM
Subject	ACIO Grade II (Executive)

Section : General awareness Current Affairs

Q.1 To commemorate which birth anniversary of Mahatma Gandhi, Gramodaya Chamber of Commerce and Technology (GCOT) instituted the 'Gramodaya Bandhu Mitra Puraskar'?

- Ans
- 1. 149th
 - 2. 151th
 - 3. 150th
 - 4. 148th

Question ID : 6009293661

Status : Marked For Review

Chosen Option : 3

Q.2 Arrange the following cricket players in descending order as per the most runs taken by them during IPL 2020.

- A. KL Rahul
- B. Shikhar Dhawan
- C. Shreyas Iyer
- D. David Warner

- Ans
- 1. C, B, A, D
 - 2. D, B, C, A
 - 3. A, B, D, C
 - 4. D, B, A, C

Question ID : 6009293672

Status : Answered

Chosen Option : 3

Q.3 Match List-1 and List-2 and select the correct answer by using the code given below the list.

List-1 (Company)	List-2 (Founder)
A. SpaceX	1. Elon Musk
B. Virgin Galactic	2. Travis Kalanick
C. Twitter Inc.	3. Jack Dorsey
D. Uber	4. Richard Branson

- Ans**
- 1. A-1, B-2, C-4, D-3
 - 2. A-1, B-4, C-3, D-2
 - 3. A-4, B-2, C-3, D-1
 - 4. A-2, B-1, C-3, D-4

Question ID : 6009293671
Status : Answered
Chosen Option : 2

Q.4 Consider the following statements about Padma Vibhushan Award for the year 2020.

- (1) Shri George Fernandes received this award posthumously for Public Affairs.
- (2) Shri Chhannulal Mishra received this award for Art

Which of the statements given above is/are correct?

- Ans**
- 1. 2 only
 - 2. Neither 1 nor 2
 - 3. Both 1 and 2
 - 4. 1 only

Question ID : 6009293665
Status : Answered
Chosen Option : 3

Q.5 Match List-1 and List-2 and select the correct answer by using the code given below the list.

List-1	List-2
Name of the Author	Name of the Book
A. Charles Dickens	1. A Christmas Carol
B. Salman Rushdie	2. Midnight's Children
C. Shashi Tharoor	3. The Company of Women
D. Khushwant Singh	4. The Great Indian Novel

- Ans**
- 1. A-2, B-1, C-3, D-4
 - 2. A-1, B-2, C-4, D-3
 - 3. A-4, B-2, C-3, D-1
 - 4. A-1, B-3, C-2, D-4

Question ID : **6009293669**
Status : **Answered**
Chosen Option : **3**

Q.6 In July 2020, Sahil Seth who is a 2011 batch Indian Revenue Service Officer, has been appointed honorary adviser of the steering committee of the-

- Ans**
- 1. Federation of Indian Chambers of Commerce and Industry
 - 2. SAARC Chamber of Commerce and Industry
 - 3. BRICS Chamber of Commerce and Industry
 - 4. G-20 Chamber of Commerce and Industry

Question ID : **6009293663**
Status : **Not Answered**
Chosen Option : **--**

Q.7 Which of the following statements about 46th United States President Joe Biden is/are correct?

- (1) He was one of the youngest senators at the age of 24
- (2) He is the oldest US President at the age of 78

- Ans**
- 1. Neither 1 nor 2
 - 2. Both 1 and 2
 - 3. 2 only
 - 4. 1 only

Question ID : **6009293666**
Status : **Answered**
Chosen Option : **3**

Q.8 Which of the following statements is true about Pradhan Mantri Vaya Vandana Yojana (PMVVY)?

- (1) It is a pension plan for senior citizens
- (2) It is managed and operated by Life Insurance Corporation (LIC)

- Ans
- 1. Neither 1 nor 2
 - 2. Both 1 and 2
 - 3. 1 only
 - 4. 2 only

Question ID : 6009293668

Status : Answered

Chosen Option : 2

Q.9 On 17th December 2020, India recently launched the CMS-01 communication satellite into the Geostationary Transfer Orbit. What statements is/are CORRECT regarding the satellite?

- 1. The satellite was launched on a PSLV-C50 launch vehicle.
- 2. The satellite will provide telecom services in the extended C-Band of the frequency spectrum.
- 3. Is India's 40th communication satellite that will replace the functions of GSAT-12 launched in 2013.

Select the correct answer using the code given below.

- (a) 1 only
- (b) 2 only
- (c) 3 only
- (d) Both 1 and 2

- Ans
- 1. b
 - 2. c
 - 3. a
 - 4. d

Question ID : 6009293674

Status : Not Attempted and Marked For Review

Chosen Option : --

Q.10 In September 2020, which of the three bills was passed by the parliament aimed at transforming agriculture in the country and raising farmers' income?

- (A) Farmers' Produce Trade and Commerce (Promotion and Facilitation) Bill, 2020
- (B) Farmers (Empowerment and Protection) Agreement on Price Assurance and Farm Services Bill, 2020
- (C) Essential Commodities (Amendment) Bill 2020
- (D) Farmers Income and MSP (Minimum Support Price) Amendment Bill, 2020

- Ans
- 1. A, D and C
 - 2. B, C and D
 - 3. A, B and C
 - 4. A, B and D

Question ID : 6009293670

Status : Answered

Chosen Option : 3

Q.11 In January 2020, at the age of 33, who became the world's youngest democratically elected leader of a country?

- Ans
- 1. Emmanuel Macron, France
 - 2. Alexandria Ocasio-Cortez, USA
 - 3. Sebastian Kurz, Austria
 - 4. Jacinda Ardern, New Zealand

Question ID : 6009293659

Status : Answered

Chosen Option : 3

Q.12 भारत के चीफ ऑफ़ डिफेंस स्टाफ की हाल में हुई नियुक्ति के बारे में निम्नलिखित में से कौन सा / से कथन सत्य है / हैं?

- (1) लगभग दो दशक पहले फरवरी 2000 में कारगिल रिव्यू कमेटी (KRC) ने चीफ ऑफ़ डिफेंस स्टाफ के गठन का सुझाव दिया था।
(2) सेवानिवृत्ति की आयु के संदर्भ में चीफ ऑफ़ डिफेंस स्टाफ का पद नियंत्रक और महालेखा परीक्षक (CAG), मुख्य चुनाव आयुक्त (CEC) और केंद्रीय सतर्कता आयुक्त (CVC) आदि के समान नहीं है।

- Ans
- 1. न तो 1 और न ही 2
 - 2. 1 और 2 दोनों
 - 3. केवल 1
 - 4. केवल 2

Question ID : 6009293667

Status : Answered

Chosen Option : 2

Q.13 Who among the following tennis players was disqualified from the US open 2020 after hitting an official with the ball?

- Ans
- 1. Nick Kyrgios
 - 2. Tim Henman
 - 3. Novak Djokovic
 - 4. Roger Federer

Question ID : 6009293656

Status : Not Answered

Chosen Option : --

Q.14 Which one of the following books won the Pulitzer Prize for the year 2020 in Fiction category?

- Ans
- 1. The Dutch House, by Ann Patchett (Harper)
 - 2. The Topeka School, by Ben Lerner (Farrar, Straus and Giroux)
 - 3. The Nickel Boys, by Colson Whitehead (Doubleday)
 - 4. A Strange Loop, by Michael R. Jackson

Question ID : 6009293655

Status : Not Attempted and Marked For Review

Chosen Option : --

Q.15 What is the term used for special arrangement allowing citizens to travel by air between specified nations without having the need to undergo on-arrival quarantine?

- Ans
- 1. Vande Bharat
 - 2. GetHomeltis
 - 3. Travel Bubbles
 - 4. Air India Express

Question ID : 6009293657
Status : Answered
Chosen Option : 3

Q.16 The Constitution (126th) Amendment Bill which was passed by Parliament in December 2019, seeks to extend the reservation quota for the SC and ST community in legislatures by another:

- Ans
- 1. 5 years
 - 2. 10 years
 - 3. 20 years
 - 4. 15 years

Question ID : 6009293664
Status : Answered
Chosen Option : 3

Q.17 When was Offshore Patrol Vessels (OPV) for the Indian Coast Guard launched and re-christened as Indian Coast Guard Ship 'Sarthak'?

- Ans
- 1. 6 June, 2020
 - 2. 9 March, 2020
 - 3. 13 August, 2020
 - 4. 6 April, 2020

Question ID : 6009293662
Status : Not Answered
Chosen Option : --

Q.18 Nobel Prize is announced at an international level which is administered by the Nobel Foundation in Stockholm, Sweden. Recently Nobel Prize winners for the year 2020 were announced. The recipients of Nobel Prize 2020 are

1. Reinhard Genzel and Andrea Ghez for the discovery of a supermassive compact object at the centre of our galaxy.
2. Gérard Mourou and Donna Strickland for their method of generating high-intensity, ultra-short optical pulses.

Select the correct answer using the code given below.

- Ans
- 1. 2 only
 - 2. Neither 1 and 2
 - 3. 1 only
 - 4. Both 1 and 2

Question ID : 6009293673
Status : Answered
Chosen Option : 3

Q.19 Who is the first female appointed as Head of human spaceflight program of National Aeronautics and Space Administration in June 2020?

- Ans
- 1. Sally Ride
 - 2. Nancy Roman
 - 3. Kathy Lueders
 - 4. Katherine Johnson

Question ID : 6009293658
Status : Not Answered
Chosen Option : --

Q.20 When did SpaceX's Falcon 9 rocket launch the SkySats 19, 20 and 21?

- Ans
- 1. April 18, 2020
 - 2. April 13, 2020
 - 3. August 18, 2020
 - 4. March 13, 2020

Question ID : 6009293660
Status : Not Answered
Chosen Option : --

Section : General studies

Q.1 The Bhima river is a tributary of which of the following rivers?

- Ans
- 1. Narmada
 - 2. Krishna
 - 3. Damodar
 - 4. Chambal

Question ID : 6009293683
Status : Not Attempted and Marked For Review
Chosen Option : --

Q.2 Consider the following statements in reference to the President of India.

1. Article 53 of the Constitution of India mentions that the executive power of the Union shall be vested in the President.
2. The President shall hold office for a term of five years from the date on which he enters upon his office.
3. Article 60 of the Constitution of India mentions about the procedure for impeachment of the President.

Which of the statements given above is/are correct?

- Ans
- 1. 1 only
 - 2. 2 and 3 only
 - 3. 1, 2 and 3
 - 4. 1 and 2 only

Question ID : 6009293694
Status : Answered
Chosen Option : 4

Q.3 Match List-I with List- II and select the correct answer using the codes given below the lists:

List-I (Sports)	List-II (Player)
A. Cricket	1. Kidambi Srikanth
B. Badminton	2. Birendra Lakra
C. Field hockey	3. Sumit Nagal
D. Tennis	4. Ajinkya Rahane

- Ans
- 1. A-2, B-1, C-4, D-3
 - 2. A-4, B-1, C-2, D-3
 - 3. A-3, B-2, C-1, D-4
 - 4. A-1, B-4, C-3, D-2

Question ID : 6009293688

Status : Answered

Chosen Option : 2

Q.4 Consider the following statements regarding Hoysala art.

1. The Hoysala style (1050 -1300 AD) developed in the southern region of Karnataka.
2. Hoysala art may be said to have its starting point in the temples of the early Chalukyas at Aihole, Badami and Pattadakal.
3. An important monument employing this art is the Kesava temple at Belur.
4. Apart from the architectural plan, the Hoysala style attained a few more distinguishing characteristics. For instance, chloritic schist was given up in favour of more tractable sandstone.

Which of the statements given above are correct?

- Ans
- 1. 1, 2 and 3
 - 2. 3 and 4 only
 - 3. 2 and 3 only
 - 4. 1 and 2 only

Question ID : 6009293691

Status : Not Answered

Chosen Option : --

Q.5 Which of the following factors determines the climate of India?

1. Latitude
2. Ocean currents
3. Distance from the sea

Select the correct answer using the codes given below.

- Ans
- 1. 2 only
 - 2. 1, 2 and 3
 - 3. 1 only
 - 4. 1 and 3

Question ID : 6009293689

Status : Answered

Chosen Option : 2

Q.6 When was the World Bank established?

- Ans
- 1. 1948
 - 2. 1942
 - 3. 1946
 - 4. 1944

Question ID : 6009293677
Status : Answered
Chosen Option : 3

Q.7 Which among the following schedules of the Indian Constitution contains provisions for the allocation of seats in the Council of States?

- Ans
- 1. Fifth
 - 2. Fourth
 - 3. Third
 - 4. First

Question ID : 6009293684
Status : Answered
Chosen Option : 3

Q.8 निम्नलिखित में से कौन-सा राज्य, किसानों द्वारा उगाई जाने वाली फसल को विनियमित करने वाला पहला राज्य है?

- Ans
- 1. मध्य प्रदेश
 - 2. हरियाणा
 - 3. तेलंगाना
 - 4. हिमाचल प्रदेश

Question ID : 6009293675
Status : Not Answered
Chosen Option : --

Q.9 Kailasanathar is the temple built by which dynasty and in which state?

- Ans
- 1. Pallava, Tamil Nadu
 - 2. Chola, Andhra Pradesh
 - 3. Chola, Tamil Nadu
 - 4. Pallava, Andhra Pradesh

Question ID : 6009293678
Status : Not Answered
Chosen Option : --

Q.10 To which state of India do the 'Khuded' folk songs belong?

- Ans
- 1. Chhattisgarh
 - 2. Odisha
 - 3. Jharkhand
 - 4. Uttarakhand

Question ID : 6009293680
Status : Not Answered
Chosen Option : --

Q.11 Who has become the first Indian to win the Richard Dawkins Award?

- Ans
- 1. Gulzar
 - 2. Javed Akhtar
 - 3. Praseen Joshi
 - 4. Naseeruddin Shah

Question ID : 6009293679
Status : Not Answered
Chosen Option : --

Q.12 Which among following statements about Bhagoriya is/are correct?

- 1. Bhagoriya is a one of the major festival of tribal people.
- 2. Bhagoriya is a Haat Market.
- 3. Bhagoriya festival celebrated in the month of May.
- 4. Bhagoriya festival celebrated by Bhil and Bhilala tribe in Madhya Pradesh.

Select the correct answer using the codes given below.

- Ans
- 1. 1, 2 and 4
 - 2. 2 Only
 - 3. 1 Only
 - 4. 1, 2 and 3

Question ID : 6009293693
Status : Not Answered
Chosen Option : --

Q.13 Consider the following statements regarding matter.

1. Matter is made up of small particles.
2. The forces of attraction between the particles in matter are maximum in gases.
3. Evaporation does not cause cooling.
4. The matter around us exists in three states: solid, liquid and gas.

Which of the statements given above is/are correct?

- Ans**
- 1. 1 only
 - 2. 3 and 4
 - 3. 2 and 4
 - 4. 1 and 4

Question ID : 6009293687
Status : Answered
Chosen Option : 4

Q.14 Consider the following statements about the use of behavioral parameters by GSTN to enhance voluntary compliance with reference to GST (Goods and Service Tax).

1. The GST rules provide for electronic generation of e-way bill for transportation of goods above a certain threshold of value of the goods being transported.
2. Return filing status of a GSTIN is visible in the public domain on the GST portal.

Which of the statements given above is/are correct?

- Ans**
- 1. 1 only
 - 2. Both 1 and 2
 - 3. 2 only
 - 4. Neither 1 nor 2

Question ID : 6009293686
Status : Not Answered
Chosen Option : --

Q.15 Vinesh Phogat is related with which of the following sports?

- Ans**
- 1. Swimming
 - 2. Tennis
 - 3. Wrestling
 - 4. Badminton

Question ID : 6009293681
Status : Answered
Chosen Option : 3

Q.16 Consider the following statements regarding the Indian National Movement.

1. Romesh Chunder Dutt, a retired ICS officer, published 'The Economic History of India' at the beginning of the 20th Century. In this book he examined in minute detail the entire economic record of colonial rule since 1757.
2. The focal point of the nationalist critique was the drain theory.

Select the correct answer using the codes given below.

- Ans**
- 1. 1 only
 - 2. 2 only
 - 3. Both 1 and 2
 - 4. Neither 1 nor 2

Question ID : 6009293685
Status : Not Answered
Chosen Option : --

Q.17 छड़ी (रॉड) की आकार के बैक्टीरिया को क्या कहा जाता है?

- Ans**
- 1. बैसिलाए
 - 2. स्फिरिलम
 - 3. वाइब्रियो
 - 4. कॉकस

Question ID : 6009293682
Status : Answered
Chosen Option : 3

Q.18 Consider the following statements regarding the characteristics of a good source of energy.

1. It would not do a large amount of work per unit volume or mass.
2. It is easily accessible.
3. It is easy to store or transport.
4. It is not economical.

Which of the statements given above are correct?

- Ans**
- 1. 1, 2, 3 and 4
 - 2. 3 and 4 only
 - 3. 1 and 2 only
 - 4. 2 and 3 only

Question ID : 6009293692
Status : Answered
Chosen Option : 4

Q.19 Match List-I with List-II and select the correct answer using the codes given below the lists.

List-I (Author)	List-II (Book)
A. Kautilya	1. Ashtadhyayi
B. Panini	2. Arthashastra
C. Kamandaka	3. Kumarasambhava
D. Kalidas	4. Nitisara

- Ans 1. A-2, B-1, C-4, D-3
 2. A-3, B-2, C-1, D-4
 3. A-1, B-4, C-3, D-2
 4. A-4, B-3, C-2, D-1

Question ID : 6009293690
Status : Answered
Chosen Option : 1

Q.20 The Treaty of Mangalore was signed between Tipu Sultan and the British East India Company in the year_____.

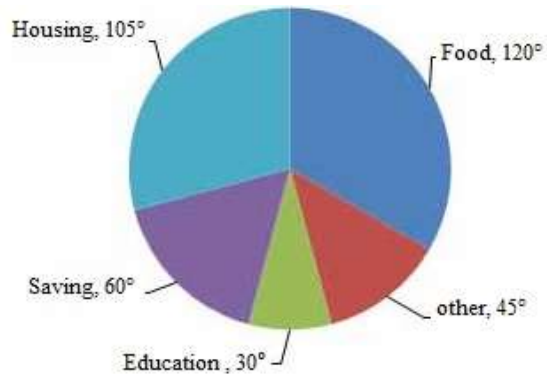
- Ans 1. 1792
 2. 1784
 3. 1782
 4. 1779

Question ID : 6009293676
Status : Not Answered
Chosen Option : --

Section : Numerical aptitude

Q.1 The pie chart given here shows expenditures incurred by a family on various items and their savings, which amount to Rs. 8,000 in a month.

Study the chart and answer the question based on the pie chart.



How much more amount is spent on food than on housing?

- Ans
- 1. Rs. 1,000
 - 2. Rs. 2,500
 - 3. Rs. 2,000
 - 4. Rs. 3,000

Question ID : 6009293705

Status : Not Attempted and Marked For Review

Chosen Option : --

Q.2 Shagun and Sheetal have 40 kg and 50 kg apples respectively. Richa takes 30 percent apples from Shagun and 46 percent apples from Sheetal. Approximately what percent of total apples are Shagun and Sheetal left with?

- Ans
- 1. 53 percent
 - 2. 61 percent
 - 3. 67 percent
 - 4. 49 percent

Question ID : 6009293704

Status : Answered

Chosen Option : 2

Q.3 Speed of a boat in still water is 10 km/hr. If speed of stream is 2 km/hr, then how much distance can the boat travel downstream in 2.5 hours?

- Ans
- 1. 30 km
 - 2. 24 km
 - 3. 32 km
 - 4. 28 km

Question ID : 6009293707

Status : Answered

Chosen Option : 1

Q.4 A certain sum of money amounts to Rs. 1331 in 3 years at 10 per cent compounded annually. Find the sum invested.

- Ans
- 1. Rs. 1050
 - 2. Rs. 1000
 - 3. Rs. 1132
 - 4. Rs. 1100

Question ID : 6009293697
Status : Answered
Chosen Option : 2

Q.5 Circumference of a circle is equal to the perimeter of a square. What is the ratio of area of circle to the area of square? (The value of π is $22/7$)

- Ans
- 1. 14 : 11
 - 2. 18 : 11
 - 3. 27 : 22
 - 4. 31 : 22

Question ID : 6009293710
Status : Answered
Chosen Option : 1

Q.6 Salary of Ram is 20 per cent more than Shyam's. By what percent is Shyam's salary less than Ram.

- Ans
- 1. 20.10
 - 2. 16.66
 - 3. 19.25
 - 4. 18.75

Question ID : 6009293712
Status : Answered
Chosen Option : 2

Q.7 Which of the following is correct?

- Ans
- 1. $\sqrt[6]{8} > \sqrt[4]{3} > \sqrt[3]{2} > \sqrt[12]{12}$
 - 2. $\sqrt[4]{3} > \sqrt[6]{8} > \sqrt[12]{12} > \sqrt[3]{2}$
 - 3. $\sqrt[4]{3} > \sqrt[6]{8} > \sqrt[3]{2} > \sqrt[12]{12}$
 - 4. $\sqrt[3]{2} > \sqrt[4]{3} > \sqrt[6]{8} > \sqrt[12]{12}$

Question ID : 6009293706
Status : Answered
Chosen Option : 1

Q.8 A, B and C start a partnership. They invested Rs. 45000, Rs. 36000 and Rs. 54000 respectively. They stayed in partnership for 4 years, 3 years and 2 years. If B's share in profit is Rs. 1800, then what is the total profit?

- Ans
- 1. Rs. 6000
 - 2. Rs. 6600
 - 3. Rs. 7200
 - 4. Rs. 7000

Question ID : 6009293709

Status : Answered

Chosen Option : 2

Q.9 Simplify the following.

$$7\frac{1}{2} \div \left\{ 4\frac{1}{4} - \frac{1}{2} \times \left(2\frac{1}{2} - 1\frac{1}{4} - \frac{3}{4} \right) \right\}$$

- Ans
- 1. 4.5
 - 2. 7.25
 - 3. 1.875
 - 4. 5.75

Question ID : 6009293695

Status : Answered

Chosen Option : 3

Q.10 Present ratio of the ages of Babita and Sunita is 7 : 9. 5 years ago, this ratio was 1:2. Find the present age of Babita.

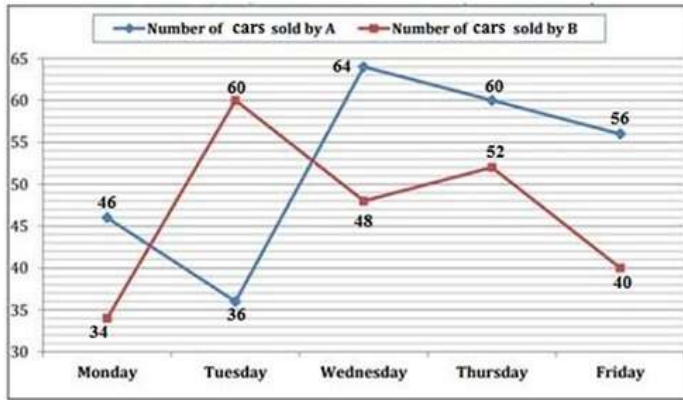
- Ans
- 1. 9 years
 - 2. 14 years
 - 3. 7 years
 - 4. 21 years

Question ID : 6009293696

Status : Answered

Chosen Option : 3

Q.11 A line graph is given below which shows the number of cars sold by seller A and seller B on five days.



Find the number of cars sold on Sunday by A and B together, if number of cars sold on Sunday is $16\frac{2}{3}$ percent more than the cars sold on Friday by A and B together?

- Ans
- 1. 116
 - 2. 112
 - 3. 114
 - 4. 120

Question ID : 6009293702

Status : Answered

Chosen Option : 2

Q.12 Find the curved surface area of cone whose height is 3 m and radius is 4 m. (approximate value) (The value of π is $\frac{22}{7}$)

- Ans
- 1. 63 m^2
 - 2. 33 m^2
 - 3. 45 m^2
 - 4. 79 m^2

Question ID : 6009293699

Status : Answered

Chosen Option : 1

Q.13 The given table shows the number of employees appointed by different organizations in the given years.

Year	Organizations					
	P	Q	R	S	T	U
2007	92	102	84	100	95	98
2008	104	107	94	99	96	105
2009	96	119	93	102	98	103
2010	101	100	86	88	97	107
2011	85	117	84	103	102	99
2012	88	97	89	100	103	102

In the year 2008, the number of employees appointed by the organization R is how much percentage more from the previous year ? (Around the nearest integer)

- Ans
- 1. 12
 - 2. 14
 - 3. 16
 - 4. 10

Question ID : 6009293703
Status : Answered
Chosen Option : 1

Q.14 What should come in place of question mark (?) in the following question ?

$$27\frac{1}{2} + 15\frac{3}{4} - 12\frac{2}{5} + 18\frac{4}{5} = ?$$

- Ans
- 1. $49\frac{13}{20}$
 - 2. $48\frac{13}{20}$
 - 3. $49\frac{33}{20}$
 - 4. 49

Question ID : 6009293713
Status : Answered
Chosen Option : 1

Q.15 Which of the following is smallest?

- Ans
- 1. $\sqrt{9} - \sqrt{7}$
 - 2. $\sqrt{6} - \sqrt{4}$
 - 3. $\sqrt{28} - 5$
 - 4. $\sqrt{18} - 4$

Question ID : 6009293714
Status : Marked For Review
Chosen Option : 2

Q.16 What is the average of first 9 prime numbers?

- Ans
- 1. 10.77
 - 2. 11.33
 - 3. 10.1
 - 4. 11.11

Question ID : 6009293708
Status : Answered
Chosen Option : 4

Q.17 A dealer sold $\frac{5}{6}$ th of his goods at 30 percent profit and the remaining at the cost price. What is his overall gain percent?

- Ans
- 1. 27.27 percent
 - 2. 25 percent
 - 3. 22.5 percent
 - 4. 30 percent

Question ID : 6009293701
Status : Answered
Chosen Option : 2

Q.18 A tank is normally filled in 4 hours. But it takes 5 hours to fill, when there is a leak at the bottom of the tank. If the tank is full, in how many hours can it be emptied by the leak?

- Ans
- 1. 12
 - 2. 20
 - 3. 10
 - 4. 15

Question ID : 6009293698
Status : Answered
Chosen Option : 2

Q.19 Rina can complete a piece of work in 6 days while Seema can do the same work in 9 days. If they both work together, then how many days will be required to finish the work?

- Ans
- 1. 4 days
 - 2. 10 days
 - 3. 7.3 days
 - 4. 3.6 days

Question ID : 6009293700
Status : Answered
Chosen Option : 4

Q.20 A and B can together complete a task in 16 days. They started a task together and after 4 days A leave, B takes 24 days to finish the rest of the task. How many days would B have taken to do the task if he worked alone?

- Ans
- 1. 30 days
 - 2. 24 days
 - 3. 32 days
 - 4. 34 days

Question ID : 6009293711
Status : Answered
Chosen Option : 3

Section : Reasoning Logical aptitude

Q.1 Select the option that is related to the third term on the same basis as the second term is related to the first term.

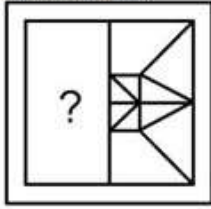
ACT : BFY :: BAD : ?

- Ans
- 1. DCI
 - 2. CDI
 - 3. CID
 - 4. ICD

Question ID : 6009293721
Status : Answered
Chosen Option : 2

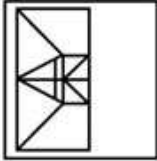
Q.2 Which answer figure will complete the pattern in the question figure?

Question Figure:

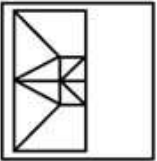


Ans

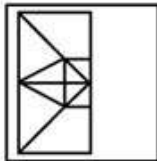
1.



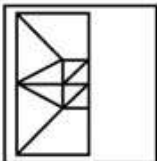
2.



3.



4.



Question ID : 6009293725

Status : Answered

Chosen Option : 2

Q.3 Which two signs should be interchanged to make the below equation mathematically correct?

$$9 \div 3 + 6 - 6 \times 2 = 30$$

Ans 1. + and ÷

2. × and ÷

3. + and -

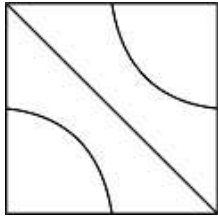
4. × and +

Question ID : 6009293730

Status : Answered

Chosen Option : 2

Q.4 From the given answer figures, select the one in which the question figure is hidden/embedded.

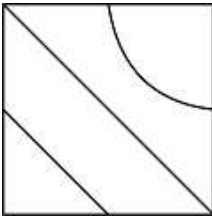


Ans

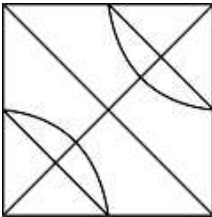
1.



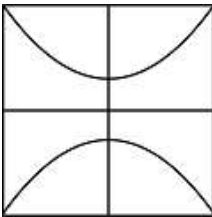
2.



3.



4.



Question ID : 6009293724
Status : Answered
Chosen Option : 3

Q.5 Three statements are followed by four conclusions numbered I, II, III and IV. You have to consider these statements to be true, even if they seem at variance from commonly known facts. Decide which of the given conclusions logically follow(s) from the given statements.

Statements:

1. All peacocks are ducks.
2. No duck is a kite.
3. All fowls are kites.

Conclusions:

- I. Some fowls are peacocks.
- II. No kite is a peacock.
- III. No peacock is a fowl.
- IV. Some kites are peacocks.

- Ans**
- 1. Only conclusions I, II and IV follow
 - 2. Only conclusions II and III follow
 - 3. Only conclusions I and IV follow
 - 4. Only conclusions I and II follow

Question ID : 6009293731
Status : Answered
Chosen Option : 2

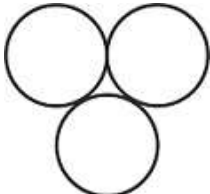
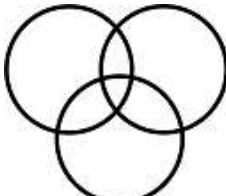
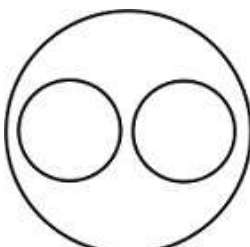

Q.6 If 'ADMONISH' is coded as 'DAOMINHS' in a particular language, then how will 'REPEATED' be coded in the same language?

- Ans**
- 1. ERPETADE
 - 2. EREPTADE
 - 3. REEPTADE
 - 4. EDATEPRE

Question ID : 6009293716
Status : Answered
Chosen Option : 2

Q.7 निम्नलिखित में से कौन सा वेन आरेख पक्षियों, पशुओं और कौओं के बीच के संबंध का सर्वश्रेष्ठ निरूपण करता है?

Ans

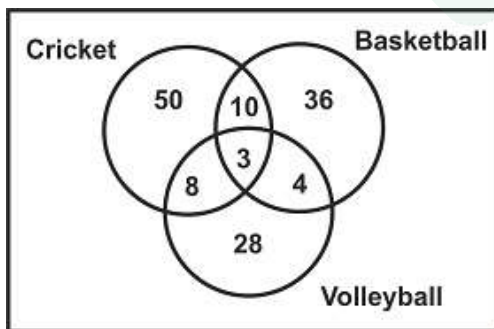
- ✗ 1. 
- ✗ 2. 
- ✗ 3. 
- ✓ 4. 

Question ID : 6009293717

Status : Answered

Chosen Option : 4

Q.8 The given Venn diagram shows the number of students who can play Cricket, Basketball and Volleyball. How many can play both Cricket and Basketball but not Volleyball?



- Ans
- ✗ 1. 8
- ✗ 2. 12
- ✓ 3. 10
- ✗ 4. 11

Question ID : 6009293723

Status : Answered

Chosen Option : 3

Q.9 Venu, Sonia, Kamal, Ria and Aish are sitting on a bench. Sonia is sitting to the right of Kamal, who is not sitting at extreme end of the bench. Ria is sitting in between Sonia and Venu. Aish is sitting at extreme left. Who is to the right of Ria?

- Ans
- 1. Kamal
 - 2. Venu
 - 3. Sonia
 - 4. Aish

Question ID : 6009293728
Status : Answered
Chosen Option : 2

Q.10 Pointing to a woman in the photograph a man said, "She is the daughter of my paternal grandmother's only son." How is the woman related to the man?

- Ans
- 1. Sister
 - 2. Sister-in-law
 - 3. Daughter
 - 4. Mother

Question ID : 6009293715
Status : Answered
Chosen Option : 1

Q.11 Thickness of 8 tyres L, M, N, O, P, Q, R and S is compared. Thickness of no two tyres is same. Thickness of N is more than L but less than 6 tyres. Thickness of O is more than M but less than Q. Thickness of P is less than only two tyres. Thickness of Q is not more than P. Which of the following statement is not correct?

- Ans
- 1. If thickness of P is 108 cm, then sum of thickness of R and S can be 219 cm
 - 2. Thickness of R is less than S
 - 3. Thickness of O is less than P
 - 4. $L < N < M < O < Q < P < S < R$ can be the correct sequence of their thickness

Question ID : 6009293732
Status : Answered
Chosen Option : 2

Q.12 Six people A, B, C, D, E and F sit around a circular table and they are facing the center, not necessarily in the same order. B sits opposite E and A sits opposite F. Neither A nor C sits adjacent to B. If A sits to the immediate right of D, then in which order these six people sit, starting from A, in clockwise direction?

- Ans
- 1. ADBCFE
 - 2. ADBFCE
 - 3. ADFBCE
 - 4. ADFCBE

Question ID : 6009293729
Status : Answered
Chosen Option : 2

Q.13 Find the missing number in the following number series:

22.5, _____, 26.5, 30, 34.5

- Ans
- 1. 23.5
 - 2. 24.5
 - 3. 27
 - 4. 24

Question ID : 6009293719

Status : Answered

Chosen Option : 4

Q.14 Two statements are given followed by four conclusions I, II, III and IV. You have to consider these statements to be true, even if they seem at variance from commonly known facts. Decide which of the given conclusions logically follow(s) from the given statements.

Statements:

- A. Some spoons are forks.
- B. Some forks are mats.

Conclusions:

- I. No spoon is a mat.
- II. Some mats are forks.
- III. Some mats are spoons.
- IV. No fork is a spoon.

- Ans
- 1. Only conclusions I and III follow
 - 2. Only conclusions II and IV follow
 - 3. Only conclusion II and either conclusion I or III follow.
 - 4. Only either conclusion I and IV follows.

Question ID : 6009293733

Status : Answered

Chosen Option : 3

Q.15 If BARK is coded as 2-1-18-11, then what is the code for WEAP?

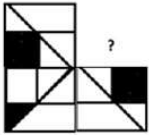
- Ans
- 1. 23-5-1-16
 - 2. 22-4-1-15
 - 3. 24-6-2-17
 - 4. 21-7-1-18

Question ID : 6009293722

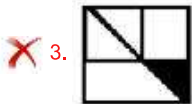
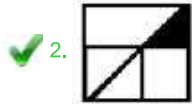

Status : Answered

Chosen Option : 1

Q.16 Select the option that can replace the question mark (?) in the given figure and complete the pattern (rotation is NOT allowed).



Ans



Question ID : 6009293727

Status : Answered

Chosen Option : 2

Q.17 Which of the answer figures is the exact mirror image of the given problem figure when the mirror is held at the right side?

Problem figure:



Ans

✗ 1.



✓ 2.



✗ 3.



✗ 4.



Question ID : 6009293734

Status : Answered

Chosen Option : 4

Q.18 In the following question, select the number which can be placed at the sign of question mark (?) from the given alternatives.

16	4	60
9	5	42
16	?	240

- Ans
- 1. 52
 - 2. 64
 - 3. 18
 - 4. 5

Question ID : 6009293726
Status : Marked For Review
Chosen Option : 3

Q.19 Complete the following series.

7D, 15H, 23L, _____

- Ans
- 1. 31Q
 - 2. 29P
 - 3. 33Q
 - 4. 31P

Question ID : 6009293720
Status : Answered
Chosen Option : 4

Q.20 In the following question below are given some statements followed by some conclusions based on those statements. Taking the given statements to be true even if they seem to be at variance from commonly known facts. Read all the conclusions and then decide which of the given conclusion logically follows the given statements.

Statements:

- I. All K are R.
- II. Some R are F.

Conclusions:

- I. Some F are K.
- II. Some R are not K.

- Ans
- 1. Only conclusion II follows
 - 2. Only conclusion I follows
 - 3. Both conclusion I and II follows
 - 4. Neither conclusion follows

Question ID : 6009293718
Status : Answered
Chosen Option : 4

Section : English

Q.1 Which of the following is correctly spelt?

- Ans
- 1. Riceprocity
 - 2. Reciprosity
 - 3. Reciprocity
 - 4. Reciprosity

Question ID : 6009293751
Status : Answered
Chosen Option : 2

Q.2 Select the word which means the same as the group of words given.

The ability to make good judgements and take quick decisions.

- Ans
- 1. Acumen
 - 2. Ineptness
 - 3. Intuition
 - 4. Perception

Question ID : 6009293749
Status : Answered
Chosen Option : 2

Q.3 Select the most appropriate option to substitute the underlined segment in the given sentence. If there is no need to substitute it, select 'No improvement'.

He was one of most respected generals because of his care for the men and his record as a fighter.

- Ans
- 1. the most respect generals
 - 2. the most respected generals
 - 3. most respected general
 - 4. No improvement

Question ID : 6009293740
Status : Answered
Chosen Option : 2

Q.4 Select the most appropriate option to substitute the underlined segment in the given sentence. If there is no need to substitute it, select 'No improvement'.

Undercover officers were sent to gather information, and they gave evidence in court from behind screens to protect their identities.

- Ans
- 1. for protecting his identities.
 - 2. in protecting their identity.
 - 3. No improvement
 - 4. to protecting their identities.

Question ID : 6009293741
Status : Answered
Chosen Option : 3

Q.5 Identify the segment of the sentence which contains a grammatical error.

Shall her flight get cancelled, your mother says she will send you a message.

- Ans
- 1. she will send you a message.
 - 2. your mother says
 - 3. Shall her flight
 - 4. get cancelled,

Question ID : 6009293739
Status : Answered
Chosen Option : 2

Q.6 In the following question, some parts of the sentence may have errors. Select the option that has the error. If the sentence has no error then select 'No Error'.

In the ancient world, theories of the origin of Earth and the objects see in the sky were certainly much less constrained.

- Ans
- 1. of Earth and the objects see in the sky
 - 2. were certainly much less constrained.
 - 3. No Error
 - 4. In the ancient world, theories of the origin

Question ID : 6009293736
Status : Answered
Chosen Option : 1

Q.7 In the following question, some parts of the sentence may have errors. Select the option that has the error. If the sentence has no error then select 'No Error'.

Fewer than one percent of the earth's water is unsalted and available for human consumption.

- Ans
- 1. Fewer than one percent of the
 - 2. for human consumption.
 - 3. No Error
 - 4. earth's water is unsalted and available

Question ID : 6009293737
Status : Answered
Chosen Option : 3

Q.8 Choose the word that means the same as the given word.

Fatigue

- Ans
- 1. Tiredness
 - 2. Clumsy
 - 3. Fresh
 - 4. Stable

Question ID : 6009293746
Status : Answered
Chosen Option : 1

Q.9 Select the most appropriate option to fill in the blank.

The problem, at least for those holidaying in Gibraltar, is that neither of these hotels _____ a beach.

- Ans
- 1. has
 - 2. have
 - 3. had
 - 4. having

Question ID : 6009293745
Status : Answered
Chosen Option : 4

Q.10 Given below are four parts of a sentence which are jumbled. Pick the option that gives their correct order to make a grammatically correct, meaningful sentence.

- A. students were expected
- B. studied in earlier classes
- C. having reached higher classes
- D. to know the formulas and principles

- Ans
- 1. ACDB
 - 2. CDAB
 - 3. ADBC
 - 4. CADB

Question ID : 6009293743
Status : Answered
Chosen Option : 4

Q.11 Select the most appropriate option to substitute the underlined segment in the given sentence. If there is no need to substitute it, select 'No improvement'.

Books costing money and requiring the user to read them for the idea to spread.

- Ans
- 1. cost money and require
 - 2. cost money and requiring
 - 3. No improvement
 - 4. costing money and require

Question ID : 6009293742
Status : Answered
Chosen Option : 1

Q.12 Select the incorrectly spelt word.

- Ans
- 1. Diminutive
 - 2. Presceint
 - 3. Spectacular
 - 4. Tectonic

Question ID : 6009293753
Status : Answered
Chosen Option : 3

Q.13 Out of all the alternatives given, select the word which closely fits the given idiom/phrase.

Barking up the wrong tree

- Ans
- 1. To blame someone unfairly for a problem.
 - 2. To be mistaken, to be looking for solutions in the wrong place.
 - 3. To ignore someone.
 - 4. Being treated the same unpleasant way you have treated others.

Question ID : 6009293748
Status : Answered
Chosen Option : 2

Q.14 Identify the segment in the sentence which contains a grammatical error.

It is often said that the way to the man heart is through his stomach.

- Ans
- 1. is through his stomach.
 - 2. that the way to
 - 3. the man heart
 - 4. It is often said

Question ID : 6009293738
Status : Answered
Chosen Option : 3

Q.15 A sentence has been given with a blank to be filled with an appropriate word. Choose the correct alternative.

Your brother is _____ intelligent than your father.

- Ans
- 1. most
 - 2. more
 - 3. many
 - 4. much

Question ID : 6009293747
Status : Answered
Chosen Option : 2

Q.16 Arrange the jumbled sentences to make a meaningful paragraph.

- A. Half the world's population is now under lockdown orders.
- B. As more information about the virus has become available, public advisories have also shape shifted accordingly.
- C. It is to help fight the Covid-19 contagion that has picked up fearful pace through the month of March.
- D. One such evolution has taken place on the question of masks.

- Ans
- 1. ADBC
 - 2. ACBD
 - 3. ABCD
 - 4. ACDB

Question ID : 6009293744
Status : Answered
Chosen Option : 3

Q.17 Identify the segment of the sentence which contains a grammatical error.

Startled, he looked around to locate the source of the sharp sound, but would not be finding any.

- Ans
- 1. but would not be finding any.
 - 2. Startled, he looked around
 - 3. to locate the source
 - 4. of the sharp sound,

Question ID : 6009293735
Status : Not Answered
Chosen Option : --

Q.18 Select the word which means the same as the group of words given.

An official pardon for people who have been convicted of political offences.

- Ans
- 1. Liberation
 - 2. Exoneration
 - 3. Immunity
 - 4. Amnesty

Question ID : 6009293754
Status : Answered
Chosen Option : 4

Q.19 Select the word which means the same as the group of words given.

A husband's (or wife's) provision for a spouse after separation or divorce; maintenance.

- Ans**
- 1. Alimony
 - 2. Remittance
 - 3. Provision
 - 4. Patrimony

Question ID : 6009293752
Status : Answered
Chosen Option : 1

Q.20 Out of all the alternatives given, select the option which closely fits the given idiom/phrase.

Bite off more than you can chew

- Ans**
- 1. To take on a project that you cannot finish.
 - 2. Taking credit for someone else achievements.
 - 3. Being treated the same unpleasant way you have treated others.
 - 4. Something considered too insignificant to create an impact.

Question ID : 6009293750
Status : Answered
Chosen Option : 1