

Punjab Police SI

**Previous Year Paper
18 Aug 2021 Shift 3**



PUNJAB POLICE

Police to its last particle is duty

Exam Name	Sub-Inspector in District Police, Armed Police, Intelligence and Investigation Cadres of Punjab Police 2021
Registration Number	
Application No	
Roll No	
Name of Candidate	
Exam Date	18th August 2021
Shift	Shift3
Subject	Sub Inspectors for District Police Armed Police Intelligence And Investigation Cadres Of Punjab Police PAPER II

Section : Sub Inspectors for District,Armed, Intelligence And Investigation Cadres Of Punjab Police PAPER II

Q.1 There are three male and three female members in a family. Nirav has a single child Kavya who is mother of Karthik's children. Misha is granddaughter of Purvi who is Kavya's mother. Meer is son of Karthik.

How Meer is related to Nirav?

- Ans
- 1. Grandfather
 - 2. Grandson
 - 3. Granddaughter
 - 4. Son

Question ID : 63068044967

Status : Answered

Chosen Option : 2

Q.2 Select the set in which the numbers are related in the same way as are the numbers of the following set.

(22, 12, 2)

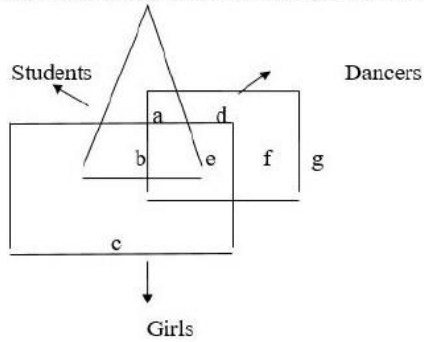
- Ans
- 1. (45, 24, 3)
 - 2. (42, 8, 6)
 - 3. (15, 20, 5)
 - 4. (24, 14, 2)

Question ID : 63068037756

Status : Answered

Chosen Option : 1

Q.3 Study the given diagram carefully and answer the question that follows.

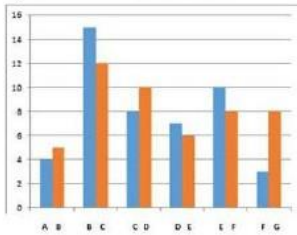


Students who are Girls as well as Dancers are indicated by the letter:

- Ans**
- 1. F
 - 2. D
 - 3. B
 - 4. E

Question ID : 63068038614
 Status : Answered
 Chosen Option : 4

Q.4 The given double bar graph shows relative outputs produced by seven employees in the given time-periods, comparing two employees at a time. For example, in the time-period that A produces 4 units, B produces 5 units. Likewise, in the time-period that B produces 15 units, C produces 12 units. The representation continues in this manner.



If every employee is paid according to one's productivity, and A gets an hourly wage of ₹175, what will be the hourly wage of G?

- Ans**
- 1. ₹525
 - 2. ₹350
 - 3. ₹400
 - 4. ₹425

Question ID : 63068041528
 Status : Answered
 Chosen Option : 3

Q.5 ਉਸ ਵਿਕਲਪ ਦੀ ਚੋਣ ਕਰੋ ਜੋ ਦਿੱਤੇ ਗਏ ਸ਼ਬਦਾਂ ਦੇ ਸਮੂਹ ਦੇ ਅਨੁਰੂਪ ਹੈ।

ਮੁਦਰਾ ਸ਼ਾਸਤਰੀ (Numismatist) : ਸਿੱਕੇ (Coins) :: _____ : _____

- Ans
1. ਸੁਨਿਆਰ (Jeweller) : ਗਹਿਣੇ (Jewels)
 2. ਨਕਸ਼ਾ ਨਵੀਸ (Cartographer) : ਨਕਸ਼ੇ (Maps)
 3. ਡਾਕ ਟਿਕਟ ਸੰਗ੍ਰਹਿਕ (Philatelist) : ਡਾਕ ਟਿਕਟਾਂ (Stamps)
 4. ਅਣੂਵਿਸ਼ਿਕੀ ਸ਼ਾਸਤਰ (Geneticist) : ਕ੍ਰੋਮੋਸੋਮ (Chromosomes)

Question ID : 63068044930

Status : Answered

Chosen Option : 2

Q.6 The question below consists of a question and two statements numbered I and II given below it. You have to decide whether the data provided in the statements are sufficient to answer the question. Read both the statements and give answer:
Six persons Kishor, Shyam, Monu, Sonu, Vedant and Anshul are sitting in a circle facing at the centre. Who is third to the left of Vedant?

I - Kishor is second to the right of Anshul and is second to the left of Monu.

II - Vedant is second to the left of Shyam, who is an immediate right of Monu.

- Ans
1. If the data in both statements I and II together are necessary to answer the question
 2. If the data given in both statements I and II together are not sufficient to answer the question
 3. If the data in statement II alone are sufficient to answer the question, while the data in statement I alone are not sufficient to answer the question
 4. If the data in statement I alone are sufficient to answer the question, while the data in statement II alone are not sufficient to answer the question

Question ID : 63068045096

Status : Answered

Chosen Option : 1

Q.7 From his house, Pintu went to 30 km to the east. Then he turned north and covered 30 km. Then he turned west and covered 60 km. Then he turned south and covered 40 km. Then he turned east and covered 30 km. Finally, turning to the south, he covered 20 km.

How far was he from the starting point?

- Ans
1. 24 km
 2. 30 km
 3. 32 km
 4. 20 km

Question ID : 63068045007

Status : Answered

Chosen Option : 2

Q.8 The given table represents the number of students studying different subjects in Seth Dayal Singh College. Study the table and answer the question that follows.

Number of Students Studying Different Subjects in Seth Dyal Singh College.

	Economics	Commerce	Management	Sociology	Psychology
Male	53	62	85	55	50
Female	45	54	25	89	82

What is the average number of female students in all the subjects in the college?

- Ans**
- 1. 47
 - 2. 41
 - 3. 57
 - 4. 59

Question ID : 63068026276

Status : **Answered**

Chosen Option : 4

Q.9 Raj walked 12 m toward north, took left turn and walked 20m. He took a left turn and walked 20 m. He again took a left turn and walked 20m.

How far is he from his initial position?

- Ans**
- 1. 15 m
 - 2. 10 m
 - 3. 20 m
 - 4. 8 m

Question ID : 63068044994

Status : **Answered**

Chosen Option : 4

Q.10 The following table shows the marks range and number of students scoring in that range.

Marks range	Number of students
1-10	5
11-20	1
21-30	3
31-40	4
41-50	2

If every student scoring 10 or less is given a grace and moved to the next score range, what will be the new student count in the score range of 11 - 20?

- Ans**
- 1. 5
 - 2. 1
 - 3. 6
 - 4. 7

Question ID : 63068041533

Status : **Answered**

Chosen Option : 3

Q.11 In the following question, select the odd word from the given alternatives.

- Ans 1. Moon
 2. Mars
 3. Venus
 4. Jupiter

Question ID : 63068045037
Status : Answered
Chosen Option : 1

Q.12 Find out the missing term:

7, 17, 55, 225, _____

- Ans 1. 224
 2. 1131
 3. 101
 4. 131

Question ID : 63068038704
Status : Answered
Chosen Option : 2

Q.13 Assuming 1st January, 2004 was Monday, then what day of the week would be 16th September, 2004?

- Ans 1. Saturday
 2. Wednesday
 3. Monday
 4. Tuesday

Question ID : 63068045055
Status : Answered
Chosen Option : 1

Q.14 Select the letter cluster that will come next in the following series.

PJ, SX, ?, HI, TF

- Ans 1. YO
 2. XP
 3. XO
 4. YP

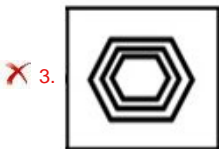
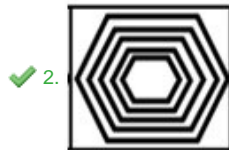
Question ID : 63068046027
Status : Not Answered
Chosen Option : --

Q.15

Each of the following questions, contain four problem figures and four answer figures. Select a figure from amongst the answer figures which will continue the same series as given in the problem figures.



Ans



Question ID : 63068045149

Status : Answered

Chosen Option : 2

Q.16

The following table shows the marks range and number of students scoring in that range.

Marks range	Number of students
1-10	5
11-20	1
21-30	3
31-40	4
41-50	2

How many students scored 40 or less?

Ans ✗ 1. 4

✗ 2. 12

✓ 3. 13

✗ 4. 10

Question ID : 63068041526

Status : Answered

Chosen Option : 3

Q.17 Which letter will replace the question mark in the given letter series?

A, F, I, N, Q, ?

- Ans
- 1. U
 - 2. T
 - 3. V
 - 4. S

Question ID : 63068046000
Status : Answered
Chosen Option : 3

Q.18 In a certain code language, B is written as D, E is written as G, I is written as J, L as N, R as S, T as V, and Y as Z. How will 'LIBERTY' be written in that language?

- Ans
- 1. NJDGSVZ
 - 2. NJDGSVX
 - 3. NJDESVZ
 - 4. NJBGSVZ

Question ID : 63068021363
Status : Answered
Chosen Option : 1

Q.19 In a week, six lectures are scheduled in such a way that the first lecture is on Monday and the last is on Sunday. IT lecture is not on Tuesday or Saturday. History lecture is immediately after the lecture of physics. Civics lecture is not on Sunday, and there is a one-day gap between the lectures of civics and biology. One day prior to the schedule of math lecture, there is no lecture (as that day is the 'off' day, and Sunday is not the 'off' day). Biology lecture is on Friday

Which of the following is the off day?

- Ans
- 1. Wednesday
 - 2. Saturday
 - 3. Tuesday
 - 4. Friday

Question ID : 63068045133
Status : Answered
Chosen Option : 2

Q.20 Select the set of numbers that is analogous to the given set.
(69, 161, 23)

- Ans
- 1. (39, 65, 13)
 - 2. (57, 133, 19)
 - 3. (93, 217, 41)
 - 4. (51, 129, 17)

Question ID : 63068037964
Status : Answered
Chosen Option : 2

Q.21 In the following question, select the related letters from the given alternatives.

KDMS : PAJH :: ETOP : ?

- Ans
- 1. PKVL
 - 2. QVLK
 - 3. VQLK
 - 4. VOLK

Question ID : 63068044915
Status : Not Answered
Chosen Option : --

Q.22 Three statements are given followed by three conclusions I, II and III. You have to consider the threestements to be true even if they seem to be at variance from commonly known facts. Read all the conclusions and then decide which of the given conclusion(s) logically follows/follow from the given statements, disregarding commonly known facts.

Statements:

Some boys are smart.
Some smart are cheaters.
All cheaters are optimists.

Conclusions:

I. Some optimists are smart.
II. Some cheaters are boys.
III. Some optimists are boys.

- Ans
- 1. Only conclusion II follows.
 - 2. Only conclusion I follows.
 - 3. Only conclusion III follows.
 - 4. Only conclusions I and II follow.

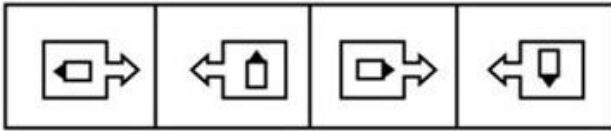
Question ID : 63068021250
Status : Answered
Chosen Option : 2

Q.23 Four number-pairs have been given, out of which three are alike in some manner and one is different. Select the number-pair that is different.

- Ans
- 1. (17, 289)
 - 2. (19, 361)
 - 3. (22, 444)
 - 4. (23, 529)

Question ID : 63068026187
Status : Answered
Chosen Option : 3

Q.24 Each of the following questions, contain four problem figures and four answer figures. Select a figure from amongst the answer figures which will continue the same series as given in the problem figures.



Ans

- ✗ 1.
- ✗ 2.
- ✓ 3.
- ✗ 4.

Question ID : 63068045158

Status : Answered

Chosen Option : 3

Q.25 Select the option in which the numbers are related in the same way as are the numbers in the given set.
(-4, -63, 257)

- ✗ 1. (-5, -124, 624)
- ✗ 2. (4, 65, 255)
- ✗ 3. (-3, -28, 80)
- ✓ 4. (-6, -215, 1297)

Question ID : 63068037810

Status : Not Answered

Chosen Option : --

Q.26 Select the option in which the numbers are related in the same way as are the numbers in the given set.

(84, 28, 56)

- Ans 1. (72, 26, 52)
 2. (60, 33, 66)
 3. (96, 32, 64)
 4. (63, 21, 48)

Question ID : 63068026198
Status : Answered
Chosen Option : 3

Q.27 In a row of boys facing North, Samit is 5th to the left of Sumit, Savit is 3rd to the right of Samit. Samvit is 3rd to the left of Sumit. Which of the following describes the position of Samvit?

- Ans 1. To the immediate right of Savit
 2. 3rd to the right of Samit
 3. To the immediate left of Savit
 4. To the immediate right of Samit

Question ID : 63068045118
Status : Answered
Chosen Option : 3

Q.28 Select the missing number from the given series.

27, 52, 102, 177, ?, 402

- Ans 1. 195
 2. 232
 3. 254
 4. 277

Question ID : 63068045272
Status : Answered
Chosen Option : 4

Q.29 The following table shows the marks range and number of students scoring in that range.

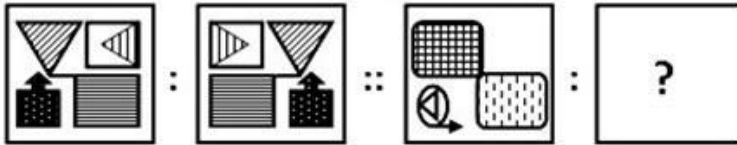
Marks range	Number of students
1-10	5
11-20	1
21-30	3
31-40	4
41-50	2

Calculate the number of students passing the exam considering score of 30 or less as fail.?

- Ans**
- 1. 3
 - 2. 5
 - 3. 2
 - 4. 6

Question ID : 63068041532
 Status : Answered
 Chosen Option : 4

Q.30 Find the figure from the answer figure that will replace the question mark (?) from the problem figure.



Ans

- 1.
- 2.
- 3.
- 4.

Question ID : 63068045178
 Status : Answered
 Chosen Option : 1

Q.31 Select the option that is related to the third number in the same way as the second number is related to the first number and the sixth number is related to the fifth number.

36 : 9 :: 42 : ? :: 51 : 14

- Ans
- 1. 12
 - 2. 10
 - 3. 11
 - 4. 8

Question ID : 63068021406
Status : Answered
Chosen Option : 2

Q.32 Following table shows the average ages of males and females from 6 towns (In years).

Town	Average age of males (In years)	Average age of females (In years)
P	50	40
Q	45	35
R	30	25
S	25	28
T	35	27
U	32	22

If ratio of the number of males to females in town R is 2:3, then what is the average age of males and females together in town R?

- Ans
- 1. 27 years
 - 2. 26 years
 - 3. 29 years
 - 4. 25 years

Question ID : 63068045250
Status : Answered
Chosen Option : 1

Q.33 ਹੇਠ ਲਿਖੇ ਪ੍ਰਸ਼ਨ ਵਿੱਚ, ਦਿੱਤੇ ਗਏ ਵਿਕਲਪਾਂ ਵਿੱਚੋਂ ਵੱਖਰੇ ਸ਼ਬਦ ਦੀ ਚੋਣ ਕਰੋ।

- Ans
- 1. ਗੁਫਾ
 - 2. ਅਸਤਬਲ
 - 3. ਤਬੇਲੇ
 - 4. ਨਿਵਾਸ

Question ID : 63068045053
Status : Answered
Chosen Option : 1

Q.34 In a certain code language, if "HIBISCUS" is coded as BIHSISUC and "MARIGOLD" is coded as RAMGIDLO, then how will "GERANIUM" be coded as in the same coding language?

- Ans
- 1. REGINAMU
 - 2. RNEGAIMU
 - 3. RAEGNIMU
 - 4. REGNAMUI

Question ID : 63068026131
 Status : Answered
 Chosen Option : 4

Q.35 In a certain code language, '9091' is coded as '900727'. How will '1808' be coded in the same language?

- Ans
- 1. 7210063
 - 2. 307210
 - 3. 172036
 - 4. 1072056

Question ID : 63068038855
 Status : Not Answered
 Chosen Option : --

Q.36 The table given below shows the number of entertainment shows (in hundreds) held in various cities in a year.

City	Shows				
	Dance	Music	Drama	Stand up Comedy	Mimicry
M	15	21	24	0.8	0.9
N	12.4	13	26	2	0.5
O	5.7	8	12	0.3	0.2
P	11.3	6	18	1	1.5
Q	17	12.4	11	3	4
R	14	10.5	9.8	0.7	0.1

The number of mimicry shows held in city M is what percent of the number of drama shows held in city O?

- Ans
- 1. 7
 - 2. 8
 - 3. 7.5
 - 4. 8.5

Question ID : 63068045242
 Status : Answered
 Chosen Option : 3

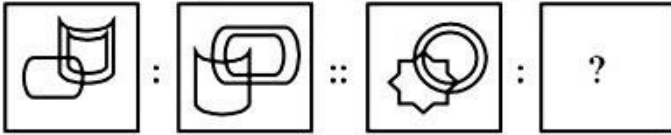
Q.37 Select the pair of letters that will come in place of the question mark (?) in the given series.

EV, HS, KP, NM, ?

- Ans 1. QJ
 2. PK
 3. PJ
 4. QP

Question ID : 63068045983
Status : Answered
Chosen Option : 1

Q.38 Find the figure from the answer figure that will replace the question mark (?) from the problem figure.



Ans

- 1.
- 2.
- 3.
- 4.

Question ID : 63068045187
Status : Answered
Chosen Option : 4

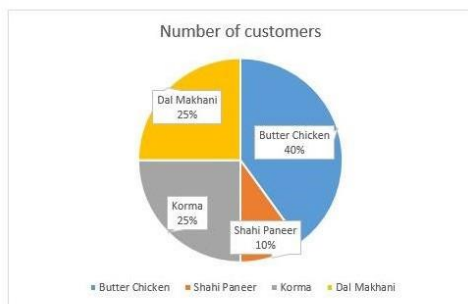
Q.39 Find the missing letters in the pattern:

_xy_zyx_w_yz_y_w

- Ans
- 1. wzwxxx
 - 2. wxyzzz
 - 3. wzwzxz
 - 4. xwyzzz

Question ID : 63068044886
Status : Answered
Chosen Option : 3

Q.40 The given pie chart presents the data on favourite dishes in a famous North Indian restaurant as per a survey done on 200 customers.



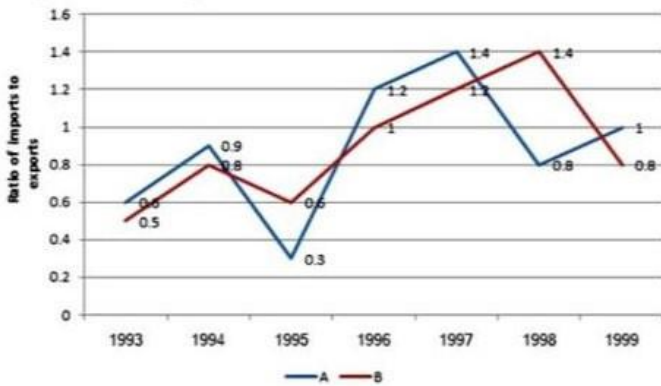
If 100 more customers were surveyed, and 20% stated Dal Makhani as their favourite dish, what would be the new percentage of customers having Dal Makhani as the favourite dish?

- Ans
- 1. 26.2%
 - 2. 25%
 - 3. 23.3%
 - 4. 35%

Question ID : 63068031256
Status : Answered
Chosen Option : 3

Q.41

The following graph shows the ratio of imports to exports by two companies over the years.



In how many of the given years were the imports more than the exports in case of company B?

- Ans 1. 2
 2. 3
 3. 4
 4. 5


Question ID : 63068045201

Status : Answered

Chosen Option : 1

Q.42

The given pie chart shows the marks scored by a student in different subjects- English, Hindi, Mathematics, Science and History in an examination.



If the total marks in Mathematics and History together are 450, then how many marks will be in English only?

- Ans 1. 150
 2. 145
 3. 175
 4. 180

Question ID : 63068045224

Status : Answered

Chosen Option : 1

Q.43 Three of the following letter-clusters are alike in a certain way and one is different.
Select the option that indicates the odd one.

- Ans 1. EWC
 2. ZDA
 3. UFP
 4. CJR

Question ID : 63068038633
Status : Not Answered
Chosen Option : --

Q.44 A family consists of seven members- Atharv, Arti, Aman, Aashi, Arav, Avni and Ayur.
Aman is father of Ayur and Avni. Aashi is wife of Avni's father. Atharv is father of Arav.
Avni is wife of Arav. Arav is son of Arti. How Avni is related to Ayur?

- Ans 1. Mother
 2. Wife
 3. Sister
 4. Daughter

Question ID : 63068044956
Status : Answered
Chosen Option : 3

Q.45 In the following question, below are given some statements followed by some conclusions. You have to take the given statements to be true even if they seem to be at variance with commonly known facts. Read all the conclusions and then decide which of the given conclusions logically follows from the given statements, disregarding commonly known facts.

Statements:

No air is a solid.
Some solids are not liquid.
All solids are iron.

Conclusions:

I. No liquid is a air.
II. At least some liquids are iron.

- Ans 1. If only conclusion I follows
 2. If only conclusion II follows
 3. If both the conclusions follow
 4. If neither conclusion I nor conclusion II follows

Question ID : 63068044868
Status : Answered
Chosen Option : 2

Comprehension:

Judicial time is precious and ought to be employed in the most efficient manner possible. Sham litigations are one such menace that not only waste the time of the courts, but also cause unwarranted prejudice and harm to parties arrayed as defendants (accused party) in such litigations (parties involved in the lawsuit), thereby defeating justice. In order to deal with such a menace, the Code of Civil Procedure, 1908 ("CPC"), under Order VII Rule 11[1] ("O7 R 11") provides defendants the option to pursue an independent and special remedy, empowering courts to summarily dismiss a suit at the threshold, without proceeding to record evidence, and conducting trial, on the basis of the evidence adduced, if it is satisfied that the action should be terminated on any grounds contained in this provision.

Recently, the Hon'ble Supreme Court of India ("SC") in the case of Dahiben v. Arvindbhai Kalyanji Bhanusali[2] ("Case"), while dealing with an appeal against an order allowing rejection of a suit at the threshold, had occasion to consider various precedents, discussing the intent and purpose of O7 R11, while setting out the principles in relation to the same. Through this judgment, the SC has emphasised that judicial time is precious, and that courts are duty bound to reject vexatious plaintiffs to avoid wastage of judicial time. It has clarified that the power of the courts under O7 R 11 are mandatory in nature and may be exercised at any stage of the suit, either before registering the plaint, or after issuing summons to the defendant, or before conclusion of the trial. However, it has also clarified that the power conferred under O 7 R 11 is a drastic one and that the requirements enumerated therein should be strictly adhered to. In this case, the SC upheld the orders of the lower courts, rejecting the plaint at the threshold since it found that the institution of the Suit by the Plaintiff was clearly an abuse of the process of the court and was bereft of any merit.

Litigants may pursue the option of seeking rejection of a plaint at the threshold, if the suit fails to disclose a valid cause of action; or is barred by any law; or if the reliefs prayed for therein are defective and un-remediable, in line with the provisions of O7 R 11. However, litigants (the person against whom the case is filed) ought to be mindful that in exercising such a power, the court cannot go into the merits of the case and has to make its determination only from a scrutiny of the averments made out in the plaint, which is presumed to be true. Additionally, the courts are also required to exercise this power with restraint. Plaints providing a prima facie cause of action are not to be simply rejected at the threshold. The decision of using the option provided under O7 R 11 should therefore be taken with due consideration of the facts and circumstances.

SubQuestion No : 46**Q.46 The SC has emphasized what as the most precious?**

- Ans
- 1. Judicial View
 - 2. Judicial Mechanism
 - 3. Judicial Duty
 - 4. Judicial Time

Question ID : 63068045448

Status : Answered

Chosen Option : 4

Comprehension:

Judicial time is precious and ought to be employed in the most efficient manner possible. Sham litigations are one such menace that not only waste the time of the courts, but also cause unwarranted prejudice and harm to parties arrayed as defendants (accused party) in such litigations (parties involved in the lawsuit), thereby defeating justice. In order to deal with such a menace, the Code of Civil Procedure, 1908 ("CPC"), under Order VII Rule 11[1] ("O7 R 11") provides defendants the option to pursue an independent and special remedy, empowering courts to summarily dismiss a suit at the threshold, without proceeding to record evidence, and conducting trial, on the basis of the evidence adduced, if it is satisfied that the action should be terminated on any grounds contained in this provision.

Recently, the Hon'ble Supreme Court of India ("SC") in the case of Dahiben v. Arvindbhai Kalyanji Bhanusali[2] ("Case"), while dealing with an appeal against an order allowing rejection of a suit at the threshold, had occasion to consider various precedents, discussing the intent and purpose of O7 R11, while setting out the principles in relation to the same. Through this judgment, the SC has emphasised that judicial time is precious, and that courts are duty bound to reject vexatious plaintiffs to avoid wastage of judicial time. It has clarified that the power of the courts under O7 R 11 are mandatory in nature and may be exercised at any stage of the suit, either before registering the plaint, or after issuing summons to the defendant, or before conclusion of the trial. However, it has also clarified that the power conferred under O 7 R 11 is a drastic one and that the requirements enumerated therein should be strictly adhered to. In this case, the SC upheld the orders of the lower courts, rejecting the plaint at the threshold since it found that the institution of the Suit by the Plaintiff was clearly an abuse of the process of the court and was bereft of any merit.

Litigants may pursue the option of seeking rejection of a plaint at the threshold, if the suit fails to disclose a valid cause of action; or is barred by any law; or if the reliefs prayed for therein are defective and un-remediable, in line with the provisions of O7 R 11. However, litigants (the person against whom the case is filed) ought to be mindful that in exercising such a power, the court cannot go into the merits of the case and has to make its determination only from a scrutiny of the averments made out in the plaint, which is presumed to be true. Additionally, the courts are also required to exercise this power with restraint. Plaints providing a prima facie cause of action are not to be simply rejected at the threshold. The decision of using the option provided under O7 R 11 should therefore be taken with due consideration of the facts and circumstances.

SubQuestion No : 47

Q.47 Under O7 R 11 courts can reject a suit at all the following stages, except

- Ans**
- 1. before conclusion of the trial
 - 2. after conclusion of the trial
 - 3. before registering the plaint
 - 4. after issuing summons to the defendant

Question ID : 63068045449

Status : Answered

Chosen Option : 2

Comprehension:

Judicial time is precious and ought to be employed in the most efficient manner possible. Sham litigations are one such menace that not only waste the time of the courts, but also cause unwarranted prejudice and harm to parties arrayed as defendants (accused party) in such litigations (parties involved in the lawsuit), thereby defeating justice. In order to deal with such a menace, the Code of Civil Procedure, 1908 ("CPC"), under Order VII Rule 11[1] ("O7 R 11") provides defendants the option to pursue an independent and special remedy, empowering courts to summarily dismiss a suit at the threshold, without proceeding to record evidence, and conducting trial, on the basis of the evidence adduced, if it is satisfied that the action should be terminated on any grounds contained in this provision.

Recently, the Hon'ble Supreme Court of India ("SC") in the case of Dahiben v. Arvindbhai Kalyanji Bhanusali[2] ("Case"), while dealing with an appeal against an order allowing rejection of a suit at the threshold, had occasion to consider various precedents, discussing the intent and purpose of O7 R11, while setting out the principles in relation to the same. Through this judgment, the SC has emphasised that judicial time is precious, and that courts are duty bound to reject vexatious plaintiffs to avoid wastage of judicial time. It has clarified that the power of the courts under O7 R 11 are mandatory in nature and may be exercised at any stage of the suit, either before registering the plaint, or after issuing summons to the defendant, or before conclusion of the trial. However, it has also clarified that the power conferred under O 7 R 11 is a drastic one and that the requirements enumerated therein should be strictly adhered to. In this case, the SC upheld the orders of the lower courts, rejecting the plaint at the threshold since it found that the institution of the Suit by the Plaintiff was clearly an abuse of the process of the court and was bereft of any merit.

Litigants may pursue the option of seeking rejection of a plaint at the threshold, if the suit fails to disclose a valid cause of action; or is barred by any law; or if the reliefs prayed for therein are defective and un-remediable, in line with the provisions of O7 R 11. However, litigants (the person against whom the case is filed) ought to be mindful that in exercising such a power, the court cannot go into the merits of the case and has to make its determination only from a scrutiny of the averments made out in the plaint, which is presumed to be true. Additionally, the courts are also required to exercise this power with restraint. Plaints providing a prima facie cause of action are not to be simply rejected at the threshold. The decision of using the option provided under O7 R 11 should therefore be taken with due consideration of the facts and circumstances.

SubQuestion No : 48

Q.48 A plain can be rejected at the threshold in all the following cases except:

- Ans**
- 1. the suit fails to disclose a valid cause of action
 - 2. order of the lower court is not acceptable to the litigants.
 - 3. the reliefs prayed for therein are defective and un-remediable
 - 4. barred by any law

Question ID : 63068045450

Status : Answered

Chosen Option : 2

Comprehension:

Judicial time is precious and ought to be employed in the most efficient manner possible. Sham litigations are one such menace that not only waste the time of the courts, but also cause unwarranted prejudice and harm to parties arrayed as defendants (accused party) in such litigations (parties involved in the lawsuit), thereby defeating justice. In order to deal with such a menace, the Code of Civil Procedure, 1908 ("CPC"), under Order VII Rule 11[1] ("O7 R 11") provides defendants the option to pursue an independent and special remedy, empowering courts to summarily dismiss a suit at the threshold, without proceeding to record evidence, and conducting trial, on the basis of the evidence adduced, if it is satisfied that the action should be terminated on any grounds contained in this provision.

Recently, the Hon'ble Supreme Court of India ("SC") in the case of Dahiben v. Arvindbhai Kalyanji Bhanusali[2] ("Case"), while dealing with an appeal against an order allowing rejection of a suit at the threshold, had occasion to consider various precedents, discussing the intent and purpose of O7 R11, while setting out the principles in relation to the same. Through this judgment, the SC has emphasised that judicial time is precious, and that courts are duty bound to reject vexatious plaintiffs to avoid wastage of judicial time. It has clarified that the power of the courts under O7 R 11 are mandatory in nature and may be exercised at any stage of the suit, either before registering the plaint, or after issuing summons to the defendant, or before conclusion of the trial. However, it has also clarified that the power conferred under O 7 R 11 is a drastic one and that the requirements enumerated therein should be strictly adhered to. In this case, the SC upheld the orders of the lower courts, rejecting the plaint at the threshold since it found that the institution of the Suit by the Plaintiff was clearly an abuse of the process of the court and was bereft of any merit.

Litigants may pursue the option of seeking rejection of a plaint at the threshold, if the suit fails to disclose a valid cause of action; or is barred by any law; or if the reliefs prayed for therein are defective and un-remediable, in line with the provisions of O7 R 11. However, litigants (the person against whom the case is filed) ought to be mindful that in exercising such a power, the court cannot go into the merits of the case and has to make its determination only from a scrutiny of the averments made out in the plaint, which is presumed to be true. Additionally, the courts are also required to exercise this power with restraint. Plaints providing a prima facie cause of action are not to be simply rejected at the threshold. The decision of using the option provided under O7 R 11 should therefore be taken with due consideration of the facts and circumstances.

SubQuestion No : 49**Q.49 Who can file an application under Order VII Rule 11 of C.P.C?**

- Ans
- 1. Any person who is not a party to the suit
 - 2. The Court on its own
 - 3. Defendant
 - 4. Plaintiff

Question ID : 63068045451

Status : Answered

Chosen Option : 3

Comprehension:

Judicial time is precious and ought to be employed in the most efficient manner possible. Sham litigations are one such menace that not only waste the time of the courts, but also cause unwarranted prejudice and harm to parties arrayed as defendants (accused party) in such litigations (parties involved in the lawsuit), thereby defeating justice. In order to deal with such a menace, the Code of Civil Procedure, 1908 ("CPC"), under Order VII Rule 11[1] ("O7 R 11") provides defendants the option to pursue an independent and special remedy, empowering courts to summarily dismiss a suit at the threshold, without proceeding to record evidence, and conducting trial, on the basis of the evidence adduced, if it is satisfied that the action should be terminated on any grounds contained in this provision.

Recently, the Hon'ble Supreme Court of India ("SC") in the case of Dahiben v. Arvindbhai Kalyanji Bhanusali[2] ("Case"), while dealing with an appeal against an order allowing rejection of a suit at the threshold, had occasion to consider various precedents, discussing the intent and purpose of O7 R11, while setting out the principles in relation to the same. Through this judgment, the SC has emphasised that judicial time is precious, and that courts are duty bound to reject vexatious plaintiffs to avoid wastage of judicial time. It has clarified that the power of the courts under O7 R 11 are mandatory in nature and may be exercised at any stage of the suit, either before registering the plaint, or after issuing summons to the defendant, or before conclusion of the trial. However, it has also clarified that the power conferred under O 7 R 11 is a drastic one and that the requirements enumerated therein should be strictly adhered to. In this case, the SC upheld the orders of the lower courts, rejecting the plaint at the threshold since it found that the institution of the Suit by the Plaintiff was clearly an abuse of the process of the court and was bereft of any merit.

Litigants may pursue the option of seeking rejection of a plaint at the threshold, if the suit fails to disclose a valid cause of action; or is barred by any law; or if the reliefs prayed for therein are defective and un-remediable, in line with the provisions of O7 R 11. However, litigants (the person against whom the case is filed) ought to be mindful that in exercising such a power, the court cannot go into the merits of the case and has to make its determination only from a scrutiny of the averments made out in the plaint, which is presumed to be true. Additionally, the courts are also required to exercise this power with restraint. Plaints providing a prima facie cause of action are not to be simply rejected at the threshold. The decision of using the option provided under O7 R 11 should therefore be taken with due consideration of the facts and circumstances.

SubQuestion No : 50

Q.50 What is the prime Motive of Order VII Rule 11 of CPC?

- Ans
- 1. To Save Judicial Time
 - 2. To increase the litigation
 - 3. To reduce unwarranted litigations
 - 4. To save Judicial Energy

Question ID : 63068045452

Status : **Answered**

Chosen Option : 1

Q.51 In MS PowerPoint 2019, which of the following is a valid file extension?

I. .ppsm

II. .ptq

- Ans
- 1. Only I
 - 2. Both I and II
 - 3. Only II
 - 4. Neither I nor II

Question ID : 63068044647

Status : **Not Answered**

Chosen Option : --

Q.52 What is full form of MMS?

- Ans
- 1. Multitext Messaging Service
 - 2. Multimedia Messaging Service
 - 3. Media Messaging Service
 - 4. Messaging Multimedia Service

Question ID : 63068044817
Status : Answered
Chosen Option : 2

Q.53 Which one is the example of connection less service?

- I. Acknowledged datagram
- II. Request-reply

- Ans
- 1. Only II
 - 2. Neither I nor II
 - 3. Only I
 - 4. Both I and II

Question ID : 63068044680
Status : Not Answered
Chosen Option : --

Q.54 The Skinny Client Control Protocol is a _____ product.

- Ans
- 1. Microsoft
 - 2. Cisco
 - 3. Apple
 - 4. Oracle

Question ID : 63068044764
Status : Not Answered
Chosen Option : --

Q.55 Which of the following are the types of viruses?

- I. Stealth viruses
- II. Polymorphic viruses
- III. Multipartite viruses

- Ans
- 1. I and II
 - 2. II and III
 - 3. I, II and III
 - 4. I and III

Question ID : 63068044853
Status : Not Answered
Chosen Option : --

Q.56 Which of the following is NOT a function of an operating system?

- Ans 1. Execution of arithmetic operations
 2. Memory management
 3. Process management
 4. Command interpretation

Question ID : 63068045627
Status : Answered
Chosen Option : 1

Q.57 Program control register holds address of the _____ instruction to be executed.

- Ans 1. Next
 2. Current
 3. Previous
 4. Next to next

Question ID : 63068045366
Status : Answered
Chosen Option : 2

Q.58 Which of the following pair is correct regarding DOS commands?

- I. Internal command – Resides on disk
II. External command – Resides always in memory

- Ans 1. Only I
 2. Both I and II
 3. Only II
 4. Neither I nor II

Question ID : 63068045650
Status : Not Answered
Chosen Option : --

Q.59 In MS Excel 2019, which shortcut key is used to open the “Go To” dialog box?

- Ans 1. Ctrl + T
 2. Alt + T
 3. Ctrl + G
 4. Alt + G

Question ID : 63068044608
Status : Answered
Chosen Option : 3

Q.60 Scanned input document is stored as _____ instead of editable text.

- Ans 1. symbols
 2. image
 3. text
 4. document

Question ID : 63068044494
Status : Answered
Chosen Option : 2

Q.61 Internet is characterized by the client server computing that consist of three basic components. Which of the following are those components?

- I. Web client (may be the Web browser)
- II. Web server
- III. Network

- Ans
- 1. II and III
 - 2. Only II
 - 3. I, II and III
 - 4. I and II

Question ID : 63068045322
Status : Answered
Chosen Option : 3

Q.62 _____ of a computer system holds data and instructions to be processed and intermediate results of processing.

- Ans
- 1. Storage unit
 - 2. CU
 - 3. ALU
 - 4. Input unit

Question ID : 63068045381
Status : Answered
Chosen Option : 1

Q.63 Which tool is NOT used during the active attacks in cybercrime?

- Ans
- 1. Arping
 - 2. Ping
 - 3. Google Earth
 - 4. Bing

Question ID : 63068044848
Status : Answered
Chosen Option : 4

Q.64 Which of the following statement is correct?

- I. Special hardware is needed for running VoIP over WiMax network.
- II. Special software is needed for running VoIP over WiMax network.

- Ans
- 1. Only I
 - 2. Both I and II
 - 3. Only II
 - 4. Neither I nor II

Question ID : 63068044739
Status : Answered
Chosen Option : 4

Q.65 In MS PowerPoint 2019, which of the following pair of shortcut key – function is correct?

- I. Ctrl + Shift + @ – Select to the beginning of a word.
- II. Ctrl + Shift + - – Select the end of a word.

- Ans
- 1. Only I
 - 2. Only II
 - 3. Both I and II
 - 4. Neither I nor II

Question ID : 63068044679
Status : Answered
Chosen Option : 2

Q.66 In MS PowerPoint 2019, which shortcut key is used to increase the font size of selected text?

- Ans
- 1. Ctrl + Shift + <
 - 2. Ctrl + Shift + (
 - 3. Ctrl + Shift +)
 - 4. Ctrl + Shift + >

Question ID : 63068044658
Status : Not Answered
Chosen Option : --

Q.67 When a new CPU includes instruction set of its predecessor CPU along with some new instructions, then new CPU is said to be_____.

- Ans
- 1. backward compatible
 - 2. right compatible
 - 3. forward compatible
 - 4. left compatible

Question ID : 63068045405
Status : Not Answered
Chosen Option : --

Q.68 Which of the following business sectors are using or can use social media?

- I. Energy sector
- II. Financial services
- III. Construction
- IV. Manufacturing sector

- Ans
- 1. I, II and III
 - 2. II, III and IV
 - 3. II and III
 - 4. I, II, III and IV

Question ID : 63068044795
Status : Answered
Chosen Option : 2

Q.69 In MS PowerPoint 2019, which of the following pair of function – tab is correct?

- I. Illustrations – Insert
- II. Word Art – View

- Ans
- 1. Both I and II
 - 2. Only I
 - 3. Neither I nor II
 - 4. Only II

Question ID : 63068044661
Status : Answered
Chosen Option : 2

Q.70 Which of the following statement is/are true about data transmission?

- I. Modulation : technique to convert analog to digital signal.
- II. Demodulation : technique to convert digital to analog signal.

- Ans
- 1. Only II
 - 2. Both I and II
 - 3. Neither I nor II
 - 4. Only I

Question ID : 63068044717
Status : Answered
Chosen Option : 2

Q.71 Which statement is true about disk pack?

- I. Disk drive is fixed.
- II. Consists of multiple hard disk platters

- Ans
- 1. Only II
 - 2. Neither I nor II
 - 3. Only I
 - 4. Both I and II

Question ID : 63068044574
Status : Not Answered
Chosen Option : --

Q.72 What is the full form of ATM?

- Ans
- 1. Automatic teller mechanics
 - 2. Auto tailor machine
 - 3. Automatic transaction machine
 - 4. Automatic teller machine

Question ID : 63068044496
Status : Answered
Chosen Option : 4

Q.73 Which of the following statement is true about printer?

I. Inkjet printer print any shape of characters, different size of print and graphics such as charts and graphs

II. Drum printer print many special characters, different sizes of print and graphics such as charts and graphs

- Ans
- 1. Only I
 - 2. Neither I nor II
 - 3. Both I and II
 - 4. Only II

Question ID : 63068044530
Status : Answered
Chosen Option : 3

Q.74 Which of the following is an advantage of key management through public key techniques?

I. No trusted third party is required.

II. The public file could reside with each entity.

- Ans
- 1. Both I and II
 - 2. Only I
 - 3. Only II
 - 4. Neither I nor II

Question ID : 63068045343
Status : Answered
Chosen Option : 1

Q.75 Which of the following combination is correct?

I. Twitter – Microblogging

II. Youtube – Video Sharing

- Ans
- 1. Only II
 - 2. Neither I nor II
 - 3. Both I and II
 - 4. Only I

Question ID : 63068044788
Status : Not Answered
Chosen Option : --

Q.76 Google bought YouTube in which year?

- Ans
- 1. 2006
 - 2. 2008
 - 3. 2005
 - 4. 2010

Question ID : 63068044811
Status : Not Answered
Chosen Option : --

Q.77 Which of the following is a valid file extension of a MS Word 2019 document?

- Ans
- 1. .dosx
 - 2. .domx
 - 3. .dotx
 - 4. .dopx

Question ID : 63068045434
Status : Answered
Chosen Option : 1

Q.78 Web browsers operate using HTTP protocol. What is the full form of HTTP?

- Ans
- 1. Hyperlink Transfer Protocol
 - 2. Hypertext Triangle Protocol
 - 3. Hyperlink Triangle Protocol
 - 4. Hypertext Transfer Protocol

Question ID : 63068045290
Status : Answered
Chosen Option : 4

Q.79 _____ is the most popular point-and-draw device generally used in Desktop computers.

- Ans
- 1. Trackball
 - 2. Mouse
 - 3. Electric Pen
 - 4. Joystick

Question ID : 63068044499
Status : Not Answered
Chosen Option : --

Q.80 The process of grouping two or more records together in a magnetic tape is known as _____.

- Ans
- 1. blocking
 - 2. joining
 - 3. appending
 - 4. recording

Question ID : 63068044567
Status : Answered
Chosen Option : 3

Q.81 'ਮੂਸਲਾਧਾਰ ਵਰਖਾ ਹੋ ਰਹੀ ਹੈ' ਵਾਕ ਦਾ ਸਹੀ ਅੰਗਰੇਜ਼ੀ ਅਨੁਵਾਦ ਹੈ:-

- Ans
1. It was raining in heavily..
 2. It is raining in torrents.
 3. It is raining like torrents.
 4. It is raining so heavily.

Question ID : 63068045579
Status : Answered
Chosen Option : 2

Q.82 A word is given followed by its usage in the options. Find the option in which there is inappropriate usage of the word.

Baleful

- Ans
- ✗ 1. Pamela got baleful looks at the theatre because of her non-stop talking.
 - ✓ 2. Why don't you be a baleful giver instead of being so selfish?
 - ✗ 3. The tiger stared at the injured deer with baleful eyes.
 - ✗ 4. Being frightened of strangers, the wounded dog gave a baleful growl.

Question ID : 63068035006
Status : Not Answered
Chosen Option : --

Q.83 Select the most appropriate option to fill in the blank.

The king's speech about great war heroes boosted the _____ of his soldiers.

- Ans
- ✓ 1. morale
 - ✗ 2. temper
 - ✗ 3. appearance
 - ✗ 4. calibre

Question ID : 63068021029
Status : Answered
Chosen Option : 1

Q.84 The underlined segment in the given sentence may contain an error. Select the corrected version from the given options. Select 'No correction', if the segment has no error.

He was so upset because he is not shortlisted for the interview.

- Ans
- ✓ 1. he was not shortlisted
 - ✗ 2. he had not shortlisted
 - ✗ 3. No correction
 - ✗ 4. he has not shortlisted

Question ID : 63068035187
Status : Answered
Chosen Option : 1

Q.85 Identify the meaning of the underlined word in the sentence from the four options given below.

Once the pasta is cooked, garnish it with mozzarella cheese and oregano.

- Ans
- 1. Paint
 - 2. Cover
 - 3. Serve
 - 4. Decorate

Question ID : 63068034885
Status : Answered
Chosen Option : 4

Q.86 Given here are six parts of a sentence. S1 and S6 are the first and the last part, respectively. The rest of the parts, namely a, b, c and d are jumbled. Select the option that gives their correct order.

S1: Information technology is

- a. from every walk of society
- b. it encompasses many applications
- c. technology of the century and
- d. also known as the

S6: making the world a global village.

- Ans
- 1. abcd
 - 2. cbda
 - 3. bcda
 - 4. dcba

Question ID : 63068026299
Status : Answered
Chosen Option : 4

Q.87 'ਉਸਦੇ ਮੂੰਹ ਨੂੰ ਲਗਾਮ ਨਹੀਂ ਹੈ' ਵਾਕ ਦਾ ਸਹੀ ਅੰਗਰੇਜ਼ੀ ਅਨੁਵਾਦ ਹੈ:-

- Ans
- 1. There is a no stop to his tongue.
 - 2. There is a no check on his speach.
 - 3. There is a no check on his tongue.
 - 4. There is a no check in his tongue.

Question ID : 63068045569
Status : Answered
Chosen Option : 3

Q.88 'ਸਾਵਧਾਨ' ਸ਼ਬਦ ਦਾ ਸਹੀ ਅੰਗਰੇਜ਼ੀ ਅਨੁਵਾਦ ਹੈ:-

- Ans 1. Cautious
 2. Cautiousness
 3. Caution
 4. Alertness

Question ID : 63068045463
Status : Answered
Chosen Option : 3

Q.89 Arrange the parts(1), (2), (3) and (4) of the following sentences to create meaningful sentences and choose the right option accordingly.

- 1) cinnamon rolls
- 2) better than fresh
- 3) nothing tastes
- 4) served piping hot

- Ans 1. 4, 3 1, 2
 2. 3, 2, 1, 4
 3. 3, 4, 2, 1
 4. 2, 3, 1, 4

Question ID : 63068035405
Status : Answered
Chosen Option : 2

Q.90 In the sentence given, identify the part that contains an error.

The examiner/ has assessed/ the answers/ very nice.

- Ans 1. has assessed
 2. very nice
 3. the answers
 4. The examiner

Question ID : 63068035528
Status : Answered
Chosen Option : 2

Q.91 The following sentence has been split into four parts. Identify the part that has a grammatical error in it.

The boy / ran / along / the corridor.

- Ans 1. ran
 2. the corridor
 3. along
 4. The boy

Question ID : 63068034824
Status : Answered
Chosen Option : 2

Q.92 'ਲਾਂਘਾ' ਸ਼ਬਦ ਦਾ ਸਹੀ ਅੰਗਰੇਜ਼ੀ ਅਨੁਵਾਦ ਹੈ:-

- Ans
- 1. Interval
 - 2. Corridor
 - 3. Corridormat
 - 4. Gap

Question ID : 63068045470
Status : Answered
Chosen Option : 2

Q.93 Mr. Sharma regularly misses his payments. So it is no surprise now that he has a **gargantuan** interest rate.

Identify the synonym of the word **GARGANTUAN** from the options given below.

- Ans
- 1. Minor
 - 2. Enormous
 - 3. Shocking
 - 4. Additional

Question ID : 63068035059
Status : Answered
Chosen Option : 2

Q.94 'ਭਜਨ' ਸ਼ਬਦ ਦਾ ਸਹੀ ਅੰਗਰੇਜ਼ੀ ਅਨੁਵਾਦ ਹੈ:-

- Ans
- 1. Chanting
 - 2. Hymn
 - 3. Prayer
 - 4. Worship

Question ID : 63068045464
Status : Answered
Chosen Option : 2

Q.95 Select the word which is closest in meaning to the word given below:
Positive

- Ans
- 1. Sickly
 - 2. Partisan
 - 3. Approving
 - 4. Support

Question ID : 63068036260
Status : Answered
Chosen Option : 3

Comprehension:

Read the passage carefully and choose the appropriate option of the given questions.

Availability, accessibility and affordability of food to all people at all times means food security. It is as essential for living as air for breathing. It is ensured if all the citizens of nation have enough nutritious food available which is directly linked to the production of food within the country, food imports and the previous years stock in government granaries, all persons have the capacity to buy food of acceptable quality to meet their dietary needs and there is no barrier on access to food. On the other hand, food security can be disrupted when the country faces a national disaster/calamity like earthquake, drought, flood, tsunami, widespread failure of crops causing famine etc. In this condition, the people living below the poverty line as well as the people above the poverty line suffers food insecurity. In India, although a large section of people suffer from food and nutrition insecurity but the worst affected groups are landless or land poor households in rural areas and people employed in ill paid occupations and casual laborers engaged in seasonal activities in the urban areas. Economically backward states with low land production, tribal and remote areas, regions affected with natural disasters are more prone to food insecurity. Starvation and food insecurity continues to haunt the poor in our country.

The Green Revolution has made India a self-sufficient in food grains during the last 30 years because of a variety of crops grown all over the country. To ensure availability of food to all sections of societies, the Indian Government has carefully designed food security system. Buffer stock and public distribution system are the two components of this system. In these two systems Food Corporation of India (FCI) plays a pivotal role in purchasing food grains mainly wheat and rice from the farmers and stock them as a buffer stock which are then procured by the government and distributed through government regulated ration shops among the poorer section of the society. This is called Public Distribution System. Items in the ration shops are sold at a lower price than the market price. In addition to these, various poverty alleviation programs were also started which ensures the food security.

SubQuestion No : 96**Q.96 Food Security means:**

- Ans** 1. Availability, affordability and accessibility of food to all people at all times
2. Affordability of food to all people at all times
3. Availability of food to all people at all times
4. Availability, Affordability and access bility of food to all not all times

Question ID : 63068035306

Status : Answered

Chosen Option : 1

Comprehension:

Read the passage carefully and choose the appropriate option of the given questions.

Availability, accessibility and affordability of food to all people at all times means food security. It is as essential for living as air for breathing. It is ensured if all the citizens of nation have enough nutritious food available which is directly linked to the production of food within the country, food imports and the previous years stock in government granaries, all persons have the capacity to buy food of acceptable quality to meet their dietary needs and there is no barrier on access to food. On the other hand, food security can be disrupted when the country faces a national disaster/calamity like earthquake, drought, flood, tsunami, widespread failure of crops causing famine etc. In this condition, the people living below the poverty line as well as the people above the poverty line suffers food insecurity. In India, although a large section of people suffer from food and nutrition insecurity but the worst affected groups are landless or land poor households in rural areas and people employed in ill paid occupations and casual laborers engaged in seasonal activities in the urban areas. Economically backward states with low land production, tribal and remote areas, regions affected with natural disasters are more prone to food insecurity. Starvation and food insecurity continues to haunt the poor in our country.

The Green Revolution has made India a self-sufficient in food grains during the last 30 years because of a variety of crops grown all over the country. To ensure availability of food to all sections of societies, the Indian Government has carefully designed food security system. Buffer stock and public distribution system are the two components of this system. In these two systems Food Corporation of India (FCI) plays a pivotal role in purchasing food grains mainly wheat and rice from the farmers and stock them as a buffer stock which are then procured by the government and distributed through government regulated ration shops among the poorer section of the society. This is called Public Distribution System. Items in the ration shops are sold at a lower price than the market price. In addition to these, various poverty alleviation programs were also started which ensures the food security.

SubQuestion No : 97

Q.97 Food Security can be disrupted when the country faces

Ans 1. Natural Disasters

2. Plenty of rainfall

3. Proper nutrients in the soil

4. Adequate yield

Question ID : **63068035307**

Status : **Answered**

Chosen Option : 1

Comprehension:

Read the passage carefully and choose the appropriate option of the given questions.

Availability, accessibility and affordability of food to all people at all times means food security. It is as essential for living as air for breathing. It is ensured if all the citizens of nation have enough nutritious food available which is directly linked to the production of food within the country, food imports and the previous years stock in government granaries, all persons have the capacity to buy food of acceptable quality to meet their dietary needs and there is no barrier on access to food. On the other hand, food security can be disrupted when the country faces a national disaster/calamity like earthquake, drought, flood, tsunami, widespread failure of crops causing famine etc. In this condition, the people living below the poverty line as well as the people above the poverty line suffers food insecurity. In India, although a large section of people suffer from food and nutrition insecurity but the worst affected groups are landless or land poor households in rural areas and people employed in ill paid occupations and casual laborers engaged in seasonal activities in the urban areas. Economically backward states with low land production, tribal and remote areas, regions affected with natural disasters are more prone to food insecurity. Starvation and food insecurity continues to haunt the poor in our country.

The Green Revolution has made India a self-sufficient in food grains during the last 30 years because of a variety of crops grown all over the country. To ensure availability of food to all sections of societies, the Indian Government has carefully designed food security system. Buffer stock and public distribution system are the two components of this system. In these two systems Food Corporation of India (FCI) plays a pivotal role in purchasing food grains mainly wheat and rice from the farmers and stock them as a buffer stock which are then procured by the government and distributed through government regulated ration shops among the poorer section of the society. This is called Public Distribution System. Items in the ration shops are sold at a lower price than the market price. In addition to these, various poverty alleviation programs were also started which ensures the food security.

SubQuestion No : 98

Q.98 Who are more vulnerable to food insecurity?

- Ans
- 1. Aristocratic people
 - 2. Affluent people
 - 3. Landlords
 - 4. Landless people

Question ID : **63068035308**

Status : **Answered**

Chosen Option : **4**

Comprehension:

Read the passage carefully and choose the appropriate option of the given questions.

Availability, accessibility and affordability of food to all people at all times means food security. It is as essential for living as air for breathing. It is ensured if all the citizens of nation have enough nutritious food available which is directly linked to the production of food within the country, food imports and the previous years stock in government granaries, all persons have the capacity to buy food of acceptable quality to meet their dietary needs and there is no barrier on access to food. On the other hand, food security can be disrupted when the country faces a national disaster/calamity like earthquake, drought, flood, tsunami, widespread failure of crops causing famine etc. In this condition, the people living below the poverty line as well as the people above the poverty line suffers food insecurity. In India, although a large section of people suffer from food and nutrition insecurity but the worst affected groups are landless or land poor households in rural areas and people employed in ill paid occupations and casual laborers engaged in seasonal activities in the urban areas. Economically backward states with low land production, tribal and remote areas, regions affected with natural disasters are more prone to food insecurity. Starvation and food insecurity continues to haunt the poor in our country.

The Green Revolution has made India a self-sufficient in food grains during the last 30 years because of a variety of crops grown all over the country. To ensure availability of food to all sections of societies, the Indian Government has carefully designed food security system. Buffer stock and public distribution system are the two components of this system. In these two systems Food Corporation of India (FCI) plays a pivotal role in purchasing food grains mainly wheat and rice from the farmers and stock them as a buffer stock which are then procured by the government and distributed through government regulated ration shops among the poorer section of the society. This is called Public Distribution System. Items in the ration shops are sold at a lower price than the market price. In addition to these, various poverty alleviation programs were also started which ensures the food security.

SubQuestion No : 99

Q.99 Food distributed in poor society through government regulated ration shops comes under

- Ans
- 1. Buffer stock
 - 2. Public Distribution System
 - 3. Green Revolution
 - 4. Food Corporation of India

Question ID : 63068035309

Status : Answered

Chosen Option : 2

Comprehension:

Read the passage carefully and choose the appropriate option of the given questions.

Availability, accessibility and affordability of food to all people at all times means food security. It is as essential for living as air for breathing. It is ensured if all the citizens of nation have enough nutritious food available which is directly linked to the production of food within the country, food imports and the previous years stock in government granaries, all persons have the capacity to buy food of acceptable quality to meet their dietary needs and there is no barrier on access to food. On the other hand, food security can be disrupted when the country faces a national disaster/calamity like earthquake, drought, flood, tsunami, widespread failure of crops causing famine etc. In this condition, the people living below the poverty line as well as the people above the poverty line suffers food insecurity. In India, although a large section of people suffer from food and nutrition insecurity but the worst affected groups are landless or land poor households in rural areas and people employed in ill paid occupations and casual laborers engaged in seasonal activities in the urban areas. Economically backward states with low land production, tribal and remote areas, regions affected with natural disasters are more prone to food insecurity. Starvation and food insecurity continues to haunt the poor in our country.

The Green Revolution has made India a self-sufficient in food grains during the last 30 years because of a variety of crops grown all over the country. To ensure availability of food to all sections of societies, the Indian Government has carefully designed food security system. Buffer stock and public distribution system are the two components of this system. In these two systems Food Corporation of India (FCI) plays a pivotal role in purchasing food grains mainly wheat and rice from the farmers and stock them as a buffer stock which are then procured by the government and distributed through government regulated ration shops among the poorer section of the society. This is called Public Distribution System. Items in the ration shops are sold at a lower price than the market price. In addition to these, various poverty alleviation programs were also started which ensures the food security.

SubQuestion No : 100

Q.100 Food grains and other items in ration shops are sold at

- Ans**
- 1. Same price as the market price
 - 2. Higher price than market price
 - 3. Free of cost
 - 4. Lower price than market price

Question ID : **63068035310**

Status : **Answered**

Chosen Option : **4**