

# IDBI ASSISTANT MANAGER 2021

## 200 Questions

---

**Que. 1** **Directions:** Study the following information carefully and answer the given questions:

S, T, U, V, W, X, Y and Z are sitting around a circle facing the centre but not necessarily in the same order.

T sits second to the left of Z's husband. The person on the immediate left of T is not a female. V's daughter sits second to the right of X. X is the sister of Y. X is not an immediate neighbour of Z's husband. Only one person sits between S and X. S is the father of Y. Z's brother V sits second to the right of Z's mother. Only one person sits between Z and Y. Y is the mother of U. Y is not an immediate neighbour of W. Z sits to third to the left of S.

What is the position of S with respect to Z?

1. Immediate left
2. Third to the right
3. Third to the left
4. Second to the right
5. Fourth to the left

**Testbook Solution** Correct Option - 2

---

**Que. 2** Who amongst the following is V's daughter?

1. T
2. U
3. W
4. Y
5. Z

**Testbook Solution** Correct Option - 1

---

**Que. 3** What is the position of S with respect to his grand child?

1. Immediate left
2. Third to the right
3. Third to the left
4. Second to the right
5. Fourth to the left

**Testbook Solution** Correct Option - 4

---

**Que. 4** How many people sit between Y and T (When counted clockwise from Y)?

1. One
2. Two
3. Three
4. Four
5. More than four

**Testbook Solution** Correct Option - 2

---

**Que. 5** Which of the following is true with respect to the given seating arrangement?

1. U is the cousin of W
2. Z and Z's husband are immediate neighbours of each other
3. No female is an immediate neighbour of U
4. Z sits third to left of her daughter
5. T is the mother of Z

**Testbook Solution** Correct Option - 2

**Que. 6** **Direction:** In the following question, a given questions is followed by information in three statements. You have to decide the data in which statement (s) is sufficient to answer the question and mark your answer accordingly.

Six people – U, V, W, X, Y and Z are sitting in a row at equal distance to each other facing towards north (not necessarily in the same order) then how many persons are sitting between U and Z?

- I. U is sitting immediate left to X while X is sitting fourth to the right of Z
- II. U and Z are not the immediate neighbours
- III. U is sitting third to the right of Z

1. Only I is sufficient
2. Only II is sufficient
3. Only III is sufficient
4. Insufficient data
5. Either I or III is sufficient

**Testbook Solution** Correct Option - 5

**Que. 7** **Direction:** The following question consists of two statements numbered I, II and III. Decide if data given in the statements are sufficient to answer the questions below.

There are five people P, Q, R, S and T. Q is the second tallest and S is immediate taller than the shortest. Who among them is in the middle when they stand in the order of their heights?

Statements:

- I. T is not the shortest.
- II. R is taller than S but shorter than Q.
- III. P ranks third in height above S when all are arranged in increasing order of height.

1. Only I and II are sufficient
2. Either only II or only I and III are sufficient
3. Only II is sufficient
4. Only II and III are sufficient
5. Question cannot be answered even with the information in all three statements.

**Testbook Solution** Correct Option - 2

**Que. 8** **Direction:** In the following question, a given questions is followed by information in two statements. You have to decide the data in which statement (s) is sufficient to answer the question and mark your answer accordingly.

How many brothers does A have?

- I. A's father has three children.
- II. A has only one sister.

1. Only I is sufficient
2. Only II is sufficient.
3. Either I or II alone is sufficient.

4. Neither I nor II is sufficient.
5. All statements are required

**Testbook Solution** Correct Option - 5

---

**Que. 9** **Direction:** In the following question, a given question is followed by information in three statements. You have to find out the data in which statement (s) is sufficient to answer the question and mark your answer accordingly.

On which day the lecture is scheduled?

**Statements:**

- I. Lecture is not on Monday and Wednesday.
- II. Sunday is considered as holiday and Lecture is not immediately before the movie day.
- III. Thursday is for yoga and Saturday is for movie.

1. All the statements are required
2. Only I is sufficient
3. Only II is sufficient
4. Only III is sufficient
5. Insufficient data

**Testbook Solution** Correct Option - 1

---

**Que. 10** **Directions:** In the following question, a given question is followed by information in three statements. You have to decide the data in which statement(s) is sufficient to answer the question and mark your answer accordingly.

What is 'Feng' written in a certain code language?

Statement I: I. 'Zhi Yan Hui Ying' is written as 'pOr kiW oOo zUi' in that code language.

Statement II: I. 'Yang Wang Ying Zhi' is written as 'mAh kiW tuT zUi' in that code language.

Statement III. 'Ying Feng Zhi Yan Hui' is written as 'oOo xXi kiW zUi pOr' in that code language.

1. The data in statement I and III is sufficient to answer the question, and the data in statement II is not required to answer the question.
2. The data in either statement I, II or III are sufficient to answer the question.
3. The data in statement II and III is sufficient to answer the question, and the data in statement I is not required to answer the question.
4. The data in all three statements together is needed to answer the question.
5. The data in all the statements, even together are not sufficient to answer the question.

**Testbook Solution** Correct Option - 1

---

**Que. 11** **Direction:** Read the following information carefully and answer the question that follows.

Ten persons A, B, C, D, E, F, G, H, I and J live on five different floors of a building but not necessarily in the same order. The bottom-most floor is numbered 1, the floor above it is numbered 2 and so on till topmost floor which is numbered as 5. There are two flats on each floor- flat – 1 and flat – 2 from west to the east such that flat – 1 is west of flat – 2. Flat – 1 of the second floor is exactly above flat – 1 of the first floor and exactly below the flat – 1 if the third floor, other flats are placed in the same way.

C lives North West of D and southwest of A. E lives on the northwest of H. Three floors are there between the F and B, which is living in the odd flat. Two floors are between B and I, which is the living left of person A. D living on the same floor as B. Two floors are there between J and C and both are at same in same flat number.

Who is living at the immediately left of person who live in third floor of flat 2?

1. A

2. B
3. C
4. E
5. G

**Testbook Solution** Correct Option - 4

---

**Que. 12** Four of the following are alike in certain way hence form a group. Find the one which does not belong to the group?

1. C - H
2. I - A
3. B - D
4. E - G
5. C - D

**Testbook Solution** Correct Option - 5

---

**Que. 13** Who is living in the south east of the person C?

1. A
2. D
3. J
4. G
5. E

**Testbook Solution** Correct Option - 2

---

**Que. 14** Which of the following statement is true?

1. D lives immediately above H
2. B lives in Flat 1
3. D lives in Flat 1
4. No one lives below C
5. No is true.

**Testbook Solution** Correct Option - 2

---

**Que. 15** The number of floors above G is same as the number of floors below \_\_\_\_\_ ?

1. A
2. H
3. F
4. E
5. C

**Testbook Solution** Correct Option - 4

---

**Que. 16** **Direction:** In the following question, three statements have been given followed by 5 sets of possible Conclusions. You have to take the given Statements to be true even if they seem to be at variance with the commonly known facts and then decide for the given Conclusion logically follows from the given statements disregarding commonly known facts.

**Statements:**

Some Balls are Chairs.

No Chair is Table.

All Tables are Furniture.

1. Some Furniture are Balls.
2. Some Balls are definitely not Table.
3. No Ball is Table.
4. Some Chairs are Furniture.
5. None is true.

**Testbook Solution** Correct Option - 2

---

**Que. 17** **Direction:** In the following question, three statements have been given followed by 5 sets of possible Conclusions. You have to take the given Statements to be true even if they seem to be at variance with the commonly known facts and then decide for the given Conclusion logically follows from the given statements disregarding commonly known facts.

**Statements:**

I. Only a few Red are Green.

II. Few Red are Pink.

III. No Pink is Yellow.

1. Some Red are Yellow.
2. Some Green are Pink.
3. No Yellow is Red.
4. Some Green are not Red.
5. All Red are Green.

**Testbook Solution** Correct Option - 4

---

**Que. 18** **Directions:** One statement is followed by two conclusions I and II. You have to consider the statements to be true, even if they seem to be at variance from commonly known facts. You are to decide which of the following conclusions can definitely be drawn from the given statements and indicate your answer accordingly.

Statement:

Indian govt. passed agriculture bills on September 27, 2020, according to that to keep food prices fair for farmers and consumers.

Conclusions:

I) There is currently widespread farmer protest.

II) Now farmers will get the fair price of food.

1. Only conclusion (I) follows
2. Only conclusion (II) follows
3. Both conclusion (I) and (II) follows
4. Either conclusion (I) or (II) follows
5. Neither conclusion (I) nor (II) follows

**Testbook Solution** Correct Option - 2

---

**Que. 19** **Directions:** Study the following information carefully and answer the given questions:

A word and number arrangement machine when given an input line of words and numbers, rearranges them following a particular rule in each step. The following is an illustration of input and rearrangement. (All the numbers are two digit numbers).

Input: monk 79 bill rock 34 73 hole 80 sand fog 22 jam 60 99

Step I: sand 99 monk 79 bill rock 34 73 hole 80 fog 22 jam 60

Step II: sand rock 99 80 monk 79 bill 34 73 hole fog 22 jam 60

Step III: sand rock monk 99 80 79 bill 34 73 hole fog 22 jam 60

Step IV: sand rock monk 99 80 79 jam 73 bill 34 hole fog 22 60

Step V: sand rock monk 99 80 79 jam hole 73 60 bill 34 fog 22

Step VI: sand rock monk 99 80 79 jam hole fog 73 60 34 bill 22

And Step VI is the last step of the above input, as the desired arrangement is obtained.

As per the followed in the above steps, find out in each of the following questions the appropriate step for the given input.

Input: 23 mat belt 50 car 36 73 hay 66 owl 40 sell fool 47

(All the numbers are two digits numbers.)

In which step are '47 23 belt car' found in same order?

1. Step V
2. Step IV
3. Step VI
4. Step III
5. No such step

**Testbook Solution** Correct Option - 2

---

**Que. 20** Which step number is the following output?

sell owl mat 73 66 50 hay fool car 47 40 36 belt 23

1. Step IV
2. Step VI
3. Step III
4. Step VII
5. Step VIII

**Testbook Solution** Correct Option - 4

---

**Que. 21** Which of the following output step represents the pairs - hay 47; car 36 in the same order?

1. Step IV
2. Step VII
3. Step V
4. Step VI
5. No such step

**Testbook Solution** Correct Option - 1

---

**Que. 22** What is the difference between the sum of first set of three numbers and the sum of next set of three numbers in the last step?

1. 87
2. 66
3. 94
4. 38
5. 59

**Testbook Solution** Correct Option - 2

---

**Que. 23** How many elements (words or numbers) are there between '50' and '36' in the sixth step?

1. Three
2. Four
3. Two
4. Five
5. Six

**Testbook Solution** Correct Option - 4

---

**Que. 24** **Direction:** Six persons A, B, C, D, E and F have different heights. Each person likes different colours - Red, Blue, White, Pink, Yellow and Grey. The one who likes Pink is not the tallest. The one who likes Blue is taller than C but shorter than the one who likes Pink. F is shorter than the one who likes Pink but taller than the one who likes Blue. F likes Red. B is taller than the one who likes Yellow but shorter than F. The one who likes Yellow is taller than E. A likes neither Pink nor Grey. The height of the second tallest is 150 cm and the height of the third lowest is 60 cm. Which of the following colour and person combination is correct?

1. A - Pink
2. B - Yellow
3. C - Yellow
4. D - Grey
5. C - White

**Testbook Solution** Correct Option - 3

---

**Que. 25** If sum of the height of D and F is 290 the what would be the possible height of F?

1. 160
2. 140
3. 130
4. 100
5. 90

**Testbook Solution** Correct Option - 2

---

**Que. 26** E likes which of the following colour?

1. Grey
2. Pink
3. Yellow
4. White
5. Blue

**Testbook Solution** Correct Option - 1

---

**Que. 27** Which of the following statement is true regarding A?

1. A likes Grey colour.
2. A is taller than only B.
3. A is not the tallest
4. A likes White colour.
5. A is shorter than D.

**Testbook Solution** Correct Option - 4

---

**Que. 28**

---

**Directions:** Each question given below consists of a statement, followed by two arguments numbered I and II. You have to decide which of the arguments is a 'strong' argument and which is a 'weak' argument.

**Statement:**

Nita had a fight with her parents. She has decided to be on her own.

**Arguments:**

- I) yes, she must start to be on her own, it's an about time.  
II) No, because of a fight one should not take decisions immediately.
1. If only argument I is strong
  2. If only argument II is strong
  3. If either I or II is strong
  4. If neither I nor II is strong and
  5. If both I and II are strong

**Testbook Solution** Correct Option - 2

---

**Que. 29** In a question below is given a statement. An assumption is something supposed or taken for granted. You have to consider the following assumption and decide which of the assumption is implicit in the statement.

**Statement:**

"Please drop this letter in the letterbox". An officer tells his assistant.

**Assumption:**

- I. The assistant would follow the instruction.  
II. The assistant knows the address where the letter is to be sent.
1. If only assumption I is implicit
  2. If only assumption II is implicit
  3. If either I or II is implicit
  4. If neither I nor II is implicit
  5. If both I and II are implicit

**Testbook Solution** Correct Option - 1

---

**Que. 30** **Direction:** Read the following information carefully and answer the questions that follow:

Nine persons are sitting in a row. Some of them are facing north while some are facing south. P sits at the 2<sup>nd</sup> position from one of the ends. R sits 3<sup>rd</sup> to the right of P. Only 2 persons sit between R and S. U sits 2<sup>nd</sup> to the right of S. Immediate neighbours of S are facing the opposite direction to that of S. Immediate neighbours of U faces the opposite direction. T sits second to the right of U. W and T faces the opposite direction. The ones sitting at the ends of row faces the opposite direction. Q is not a neighbour of U and P. W sits at one of the extreme ends. V sits adjacent to T. X does not face south.

Who is sitting at the left end of the row?

1. X
2. P
3. Q
4. W
5. None of these

**Testbook Solution** Correct Option - 4



**Que. 31** How many persons are sitting between P and U?

1. 3
2. 2
3. 4
4. 1
5. None of these

**Testbook Solution** Correct Option - 1

---

**Que. 32** Who is sitting second to the right of V?

1. W
2. T
3. R
4. None of these
5. Cannot be determined

**Testbook Solution** Correct Option - 5

---

**Que. 33** Who is sitting in the middle of the row?

1. T
2. R
3. U
4. V
5. P

**Testbook Solution** Correct Option - 2

---

**Que. 34** Four of the following five belong to a group following a certain pattern. Who does not belong to the group?

1. PT
2. TU
3. UT
4. US
5. RV

**Testbook Solution** Correct Option - 4

---

**Que. 35** **Directions:** Study the following question and answering the question referring to the word and number sequence below:

18 LKJ 23 FTO 15 JIS 21 URB 16 CEH

In the above arrangement, each word is preceded by a number. If the word is preceded by an even number then the letter equivalent to the place value of that number as per the English alphabetical series will be placed at the start of the word and if the word is preceded by an odd number then the letter equivalent to the place value of that number as per the English alphabetical series will be placed at the end of the word.

How many words are there which ends or starts with a vowel or both?

1. One
2. Two
3. Three
4. Four
5. Five

**Testbook Solution** Correct Option - 2

---

**Que. 36** **Direction:** Read the instructions carefully to answer the questions given below.

Eleven people A, B, C, D, E, F, G, H, I, J, and K work in three different departments of a company namely HR, IT, and Finance. Not less than three people work in a department and not more than five people work in a department.

B works neither with G nor K. E does not work with I. H works with F in the same department. K works in the HR department. F does not work with either G or B. Not more than three people work in the HR department. E works in the same department as J. G works in the same department as D. A does not work in the IT department. C and D work in the same department and they do not work in the IT department.

Who among the following works with 'I' in the same department?

1. J
2. K
3. F
4. C
5. H

**Testbook Solution** Correct Option - 4

---

**Que. 37** Who among the following works in the HR department?

1. K
2. G
3. I
4. E
5. C

**Testbook Solution** Correct Option - 1

---

**Que. 38** Who are the people who work in the IT department?

1. F, J, and E
2. C, E, J, and A
3. C, D, G, and F
4. B, E, and J
5. H, E, and C

**Testbook Solution** Correct Option - 4

---

**Que. 39** Which of the following statement is correct?

1. B and A works in the same department.
2. C and I works in the different department.
3. A and D works in the same department
4. F works in the IT department.
5. D works in the HR department.

**Testbook Solution** Correct Option - 3

---

**Que. 40** Who among the following work with B in the same department?

1. A
2. E

3. D
4. F
5. G

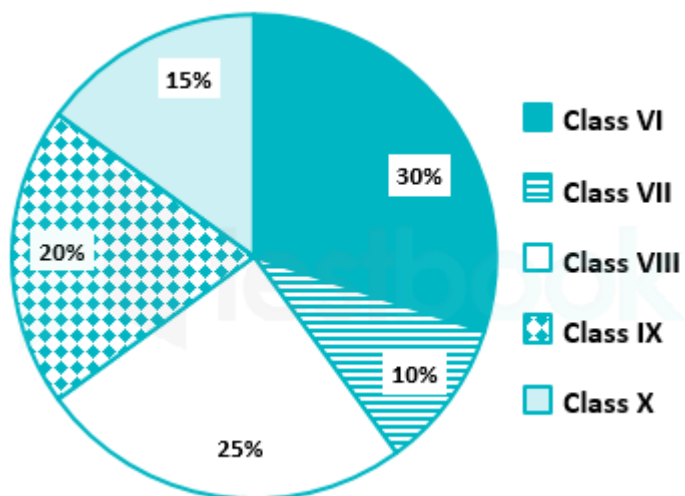
**Testbook Solution** Correct Option - 2

**Que. 41** **Direction:** Study the pie – chart carefully and answers the given questions:

Pie chart represents the percentage of girls and boys studying in different classes in a school.

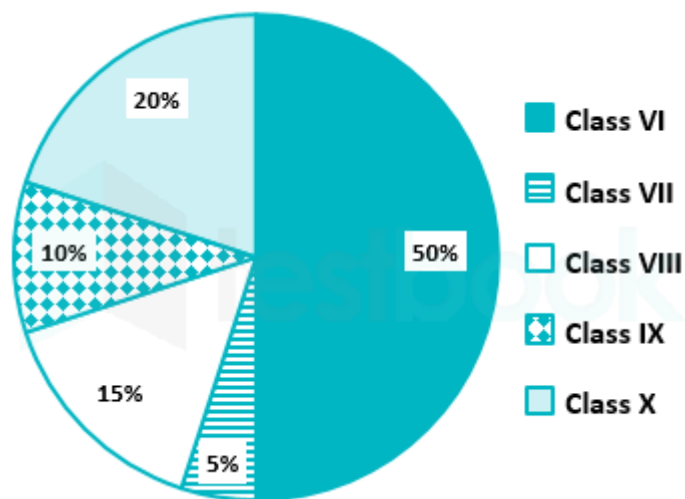
Total no. of students = 10,000

Each sector of pie-chart represents the percentage of students studying in different class.



Total no. of students got promoted = 4500

Each sector represent the percentage of students got promoted from each class.



What is the total number of students in class VI and VII together?

1. 3000
2. 4000
3. 4500
4. 5000
5. 1500

**Testbook Solution** Correct Option - 2

**Que. 42** Find the average of students who got promoted from class IX, X and VI.

1. 1200
2. 1400

3. 1600
4. 1800
5. 2000

**Testbook Solution** Correct Option - 1

---

**Que. 43** What is the ratio of promoted students from class X to class IX?

1. 2 : 1
2. 2 : 3
3. 3 : 4
4. 5 : 6
5. 7 : 9

**Testbook Solution** Correct Option - 1

---

**Que. 44** What is the ratio of the total number of students to the total number of students who do not get promoted?

1. 33 : 23
2. 20 : 11
3. 11 : 67
4. 23 : 35
5. 20 : 17

**Testbook Solution** Correct Option - 2

---

**Que. 45** The number of students who got promoted from class VI is what percent of the total number of students in that class.

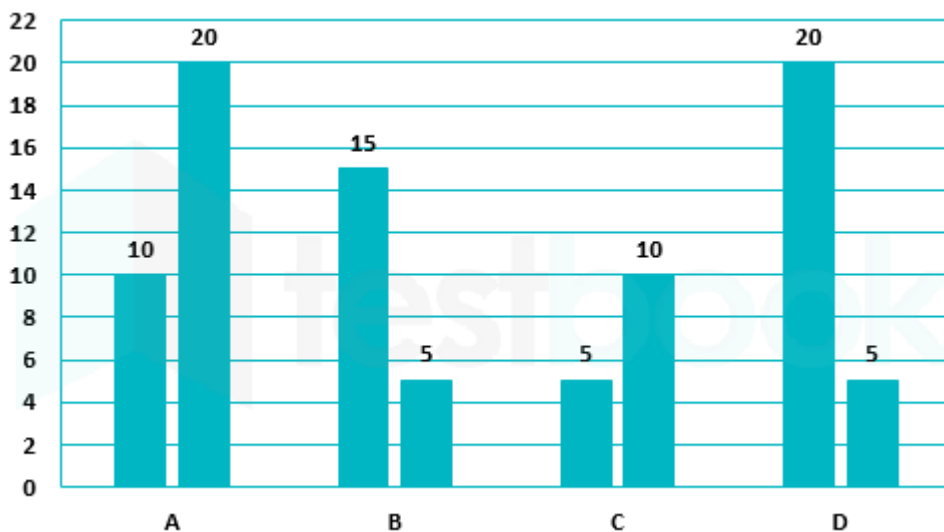
1. 75%
2. 25%
3. 45%
4. 65%
5. 85%

**Testbook Solution** Correct Option - 1

---

**Que. 46** **Directions:** Read the data carefully and answer the following questions.

Bar graph shows that 2 successive discounts allowed on four different articles.



If the ratio of marked price of A to B is 2 : 3 and difference between selling price of both the article is 1198.65, find difference between marked prices of article A and B

1. 820
2. 1220
3. 1020
4. 1100
5. 11300

**Testbook Solution** Correct Option - 2

---

**Que. 47** Marked price of D is 20% less than that of A and sum of selling price of both the articles is 3984 and loss on D is 20% and profit on A is 20%. Find the ratio of cost price of D to that of A.

1. 15 : 17
2. 17 : 10
3. 10 : 17
4. 19 : 15
5. 15 : 19

**Testbook Solution** Correct Option - 4

---

**Que. 48** If the ratio of selling price of B to D is 5 : 8, then find the ratio of marked price of B to D.

1. 578 : 176
2. 323 : 190
3. 109 : 177
4. 190 : 323
5. 155 : 190

**Testbook Solution** Correct Option - 4

---

**Que. 49** If second discount on A is increased by 20%, then the selling price of the articles decreased by 108 and selling price of C is Rs.120 less than that of A. Find the marked price of C.

1. Rs. 2578
2. Rs. 2456
3. Rs. 2386
4. Rs. 1988
5. Rs. 1476

**Testbook Solution** Correct Option - 3

---

**Que. 50** Ratio of selling price of A to B is 5 : 2 and sum of marked price of both the article is Rs. 61000. Find the difference between Selling price of both the articles.

1. 15,500
2. 19,480
3. 45,700
4. 22,600
5. 35,710

**Testbook Solution** Correct Option - 2

**Que. 51** **Directions:** Study the table given below carefully and answer the question that follows.

Table giving total number of people lives in five different societies, percentage of children and ratio of male to female in these societies.

Name of society	Total number of people living in society	Ratio of male to female	Percentage of children
Gokuldhham	2700	4 : 5	20%
Aparnam	1980	65 : 67	33.33%
Kalavati	2100	11 : 10	30%
Madhuban	2400	45 : 39	30%
Rangmahal	1920	7 : 5	25%

What is the ratio between the males living in Aparnam society to the females living in Madhuban society.

1. 5 : 6
2. 6 : 5
3. 13 : 15
4. 15 : 13
5. None of these

**Testbook Solution** Correct Option - 1

---

**Que. 52** What is the average number of children of Gokuldhham society, Kalavati society and Rangmahal society together?

1. 500
2. 550
3. 600
4. 650
5. None of these

**Testbook Solution** Correct Option - 2

---

**Que. 53** The number of males living in Gokuldhham society is how much percent more than the number of children of Madhuban society.

1. 20%
2. 25%
3. 33.33%
4. 30%
5. None of these

**Testbook Solution** Correct Option - 3

---

**Que. 54** What is the difference between the number of females in Rangmahal society and that of Kalavanti society?

1. 200
2. 150
3. 250
4. 100
5. None of these

**Testbook Solution** Correct Option - 4

---

**Que. 55** Children of Gokuldham and Aparnam society together is approximately what percent of the males and females of Madhuban society together.

1. 70%
2. 71.5%
3. 73%
4. 75%
5. None of these

**Testbook Solution** Correct Option - 2

---

**Que. 56** **Directions:** Two quantities A and B are given in the following questions. You have to find the value to both A and B by using your knowledge of mathematics and choose the most suitable relation between the magnitude of A and B from the given options.

X and Y start a business with Rs. 60000 and Rs. 96000 as their initial capitals. However, after 8 months Y leaves the business and Z who was the working partner till then, invests Rs. 144000 in the business. At the end of the year, there is a profit of Rs. 344568 and Z will get 15% of the profit as salary and rest will be divided in the ratio of their investments.

Quantity A - Total profit share of X.

Quantity B - Total profit share of Z.

1. Quantity A  $\geq$  Quantity B
2. Quantity A  $\leq$  Quantity B
3. Quantity A = Quantity B or no relationship can be established
4. Quantity A > Quantity B
5. Quantity A < Quantity B

**Testbook Solution** Correct Option - 5

---

**Que. 57** **Directions:** Two quantities A and B are given in the following questions. You have to find the value to both A and B by using your knowledge of mathematics and choose the most suitable relation between the magnitude of A and B from the given options.

A shopkeeper uses faulty weights sometimes while dealing. When he buys his goods from traders he cheats by 20% (takes 20% more weight). Now to Ram, he sells at Cost price but cheats by 25% in weight and to Shyam gives at a profit of 30% but does not cheat in weight.

Quantity A - Profit percent while selling to Ram.

Quantity B - Profit percent while selling to Shyam.

1. Quantity A  $\geq$  Quantity B
2. Quantity A  $\leq$  Quantity B
3. Quantity A = Quantity B or no relationship can be established
4. Quantity A > Quantity B
5. Quantity A < Quantity B

**Testbook Solution** Correct Option - 4

---

**Que. 58** **Directions:** Two quantities A and B are given in the following questions. You have to find the value to both A and B by using your knowledge of mathematics and choose the most suitable relation between the magnitude of A and B from the given options.

Quantity A - Ratio of X's profit to total profit. Ratio of investment of X and Y is 5 : 8. X increases his investment by 60% after 6 months while Y decreases his investment by 25% after 8 months.

Quantity B - Probability of X shooting the target and Y missing in 1 shot. Probability of X hitting is  $\frac{2}{3}$  while that of Y hitting is  $\frac{5}{6}$ .

1. Quantity A  $\geq$  Quantity B
2. Quantity A  $\leq$  Quantity B
3. Quantity A = Quantity B or no relationship can be established
4. Quantity A > Quantity B
5. Quantity A < Quantity B

**Testbook Solution** Correct Option - 4

---

**Que. 59** **Directions:** Two quantities A and B are given in the following questions. You have to find the value to both A and B by using your knowledge of mathematics and choose the most suitable relation between the magnitude of A and B from the given options.

Quantity A - Percentage increase in Total surface area. Sphere of 7 cm radius is cut into two hemispheres.

Quantity B - Find the number on which NEATS will come. All the words made from letters of word NEATS are arranged in alphabetical order.

1. Quantity A  $\geq$  Quantity B
2. Quantity A  $\leq$  Quantity B
3. Quantity A = Quantity B or no relationship can be established
4. Quantity A > Quantity B
5. Quantity A < Quantity B

**Testbook Solution** Correct Option - 5

---

**Que. 60** **Directions:** Two quantities A and B are given in the following questions. You have to find the value to both A and B by using your knowledge of mathematics and choose the most suitable relation between the magnitude of A and B from the given options.

Quantity A - Distance between trains after 3 hours. Train X travels 420 km in 7 hours. Ratio of speeds of train X and Y is 5 : 3. Trains are 100 km apart and are travelling towards each other.

Quantity B - Distance (in km) travelled in 2 hours. Bus can travel 300 m in 12 seconds.

1. Quantity A  $\geq$  Quantity B
2. Quantity A  $\leq$  Quantity B
3. Quantity A = Quantity B or no relationship can be established
4. Quantity A > Quantity B
5. Quantity A < Quantity B

**Testbook Solution** Correct Option - 4

---

**Que. 61** **Find out the most effective word from the given options to fill the blanks of the following question.**

1. More than 300 graves were \_\_\_\_\_ by the invading army.
2. Because the priests were knowledgeable men, they never \_\_\_\_\_ the holy chambers
  1. Desecrated
  2. Dilapidated
  3. Convoluted
  4. Persecuted
  5. Devastated

**Testbook Solution** Correct Option - 1

---

**Que. 62** **Direction:** The sentence given below has a blank space and five words are given in the options. Click on the word which you consider the most APPROPRIATE to fit the blank.



None of these strikes targeted Bin Laden, who seemed to have vanished like a \_\_\_\_\_.

1. Wraith
2. Wreath
3. Pusillanimous
4. Patriot
5. Despondent

**Testbook Solution** Correct Option - 1

---

**Que. 63** Fill in the blanks with the correct option from the options given below.

\_\_\_\_\_ spring, the twinkling \_\_\_\_\_ from thousands of fireflies illuminate the forest.

- A. Each, Luminescence  
B. Every, Lights  
C. In, Brightness

1. Only A
2. Only B
3. Only C
4. Both A and B
5. Both B and C

**Testbook Solution** Correct Option - 2

---

**Que. 64** Fill in the blanks by choosing the correct option from the options given below.

Now more than ever many are \_\_\_\_\_ of how much our well-being is \_\_\_\_\_ to the natural world.

- A. Aware, Linked  
B. Conscious, Connected  
C. Debating, Tired

1. Only A
2. Only B
3. Only C
4. Both A and B
5. Both B and C

**Testbook Solution** Correct Option - 4

---

**Que. 65** Fill in the blanks with appropriate words from the options given below.

Why \_\_\_\_\_ birds migrate and others do not is an example of a complex and active field of \_\_\_\_\_.

- A. Only, Science  
B. Some, Research  
C. Certain, Study

1. Only A
2. Only B
3. Only C
4. Both A and B
5. Both B and C

**Testbook Solution** Correct Option - 5

**Que. 66** Read the passage carefully and select the best answer to each question out of the given five alternatives.

The Reserve Bank of India's Monetary Policy Committee (MPC) on Wednesday left policy rates unchanged at record low levels as it was still unsure about the sustainability of economic recovery due to the second wave of Covid-19 infections.

The central bank, however, announced a bond-buying calendar that will ensure that borrowers reap the benefits of a low-interest rate regime.

The repo rate, the main policy rate (it is the rate at which the RBI lends money to commercial banks), has been retained at 4 percent because the MPC wants to ensure that "the prospects of sustained recovery are well secured". "The renewed jump in Covid-19 infections in certain parts of the country and the associated localized lockdowns could dampen the demand for contact-intensive services, **restrain** growth impulses, and prolong the return to normalcy. In such an environment, continued policy support remains necessary," the MPC stated. India recently became the second country after the US to report daily fresh infections of over 100,000.

In Wednesday's statement, the MPC retained its assessment of FY22 GDP growth of 10.5 percent. It also raised its projection for consumer price inflation a bit to 5.2 percent for the first half of the current fiscal year. The RBI announced a government securities acquisition programme (GSAP), essentially a calendar of its bond-buying programme, starting with Rs 1 lakh crore of securities purchases in the first quarter of the current fiscal year.

This new GSAP programme will run along with the RBI's regular open market operations and other liquidity management facilities, RBI Governor Shaktikanta Das reiterated in a post-policy announcement interaction. Earlier, the central bank had committed that it would purchase not less than Rs 3 lakh crore of bond purchases in FY22.

Meanwhile, the rupee lost 1.5 percent Wednesday, its biggest single-day fall in 20 months, as the RBI laid out plans for the government bond-buying programme.

Government bond yields have been rising sharply since the Centre announced a big borrowing programme for the current fiscal. That, along with the rise in sovereign bond yields in the rest of the world, and inflation fears, meant that the yield on the 10-year benchmark government bond, an average of 5.93 percent between April 2020 and January 2021, had risen to a high of 6.25 percent in March.

Bond yields and prices move in opposite directions — when there is demand for bonds such as due to extra buying from RBI, bond prices go up while yields come down.

Government security yields represent the risk-free rate in the economy and act as a base for all other interest rates. Thus, between February and March-end, yields on AAA corporate bonds (the highest rated) increased by as much as 31 basis points, despite the RBI not increasing rates or withdrawing liquidity.

Corporate bond issuance in February at Rs 45,685 crore moderated from its peak of Rs 88,130 crore recorded in December 2020. In effect, the rising bond yields weakened the central bank's easy monetary stance and it had to do something about it.

The RBI's bond purchase calendar will give confidence to bond market participants that a huge supply of government borrowings will not drive up yields too much. It also supports the easy monetary policy stance at a time when the second wave adds to **uncertainty** about economic growth and inflation.

"The evolving CPI inflation trajectory is likely to be subjected to both upside and downside pressures," said the MPC. It said that the bumper food grain production and imports should keep a lid on food prices but warned about high international commodity prices, increased logistics costs, and heightened inflation expectations of households as risk factors.

The central bank also extended measures to improve credit flow to the economy, some of which were introduced last year to fight the pandemic. It extended its long-term repo operations (lending money to banks), extended refinance facilities for NABARD and SIDBI to help MSMEs, and made it easier for banks to continue lending to sectors such as agriculture and MSMEs via NBFCs.

Find the relation between the statements given below.

**Statement I:** The RBI's bond purchase calendar will give confidence to bond market participants.

**Statement II:** Bond-buying calendar will ensure that borrowers reap the benefits of a low interest rate regime.

1. Statement (I) is the cause and Statement (II) is the effect
2. Statement (II) is the cause and Statement (I) is the effect

3. Both the Statement (I) and Statement (II) are independent causes
4. Both the statements (I) and (II) are effects of independent causes
5. Both the statements (I) and (II) are effects of some common cause

**Testbook Solution** Correct Option - 1

---

**Que. 67** What is the rate of GDP growth that is predicted for FY22?

1. 5.93%
2. 31%
3. 5.2%
4. 10.5%
5. 1.5%

**Testbook Solution** Correct Option - 4

---

**Que. 68** What is the minimum amount of the securities purchases through GSAP in the first quarter of the current fiscal year?

1. Rs. 3 lakh
2. Rs. 1 lakh
3. Rs. 3.5 lakh crore
4. Rs. 1.5 lakh crore
5. Rs. 1 lakh crore

**Testbook Solution** Correct Option - 5

---

**Que. 69** Why did the central bank extend the refinance facilities for the SIDBI?

1. To help the agricultural sectors
2. To help the MSMEs
3. It would help to control the inflation of the economy
4. To increase the demand of corporate bonds
5. Because it was announced in the bond-buying calendar

**Testbook Solution** Correct Option - 2

---

**Que. 70** What is the rate of the consumer price inflation for the first half of the current fiscal year?

1. 1.49%
2. 4.5%
3. 5.2 %
4. 5.6%
5. 4%

**Testbook Solution** Correct Option - 3

---

**Que. 71** What has been mentioned about the AAA corporate bonds between February and March-end?

1. AAA corporate bonds increased by as much as 31 basis points
2. AAA corporate bonds increased by as much as 23 basis points
3. AAA corporate bonds increased by as much as 49 basis points
4. AAA corporate bonds increased by as much as 45 basis points
5. AAA corporate bonds increased by as much as 13.5 basis points

**Testbook Solution** Correct Option - 1

---

**Que. 72** Which of the following statements is true?

1. The Indian economy is now experiencing sustained growth due to the GSAP programme.
2. The previous repo rate was not four percent.
3. The central bank extended long-term repo operations and refinance facilities as a measure to improve the credit flow to the economy.
4. The corporate bond was at its peak in February.
5. The Central Govt. did not announce any big borrowing programme for the current fiscal.

**Testbook Solution** Correct Option - 3

---

**Que. 73** Which of the following is a false statement according to the passage?

1. In some parts of the country the renewed jump in Covid -19 infections is observed.
2. The renewed jump in Covid-19 may extend the return to normalcy.
3. US is the only country to report daily fresh infections.
4. The central bank would purchase not less than Rs 3 lakh crore of bond purchases in FY22.
5. If there is demand for bonds, the bond prices go up while yields come down.

**Testbook Solution** Correct Option - 3

---

**Que. 74** Choose the synonym of the word 'Restrain'.

1. Compel
2. Utter
3. Constant
4. Impede
5. Encourage

**Testbook Solution** Correct Option - 4

---

**Que. 75** Choose the antonym of the word 'Uncertainty'.

1. Predictability
2. Indecision
3. Wavering
4. Transformation
5. Emerging

**Testbook Solution** Correct Option - 1

---

**Que. 76** Rearrange the following sentences in the right order so that they make a grammatically correct and meaningful paragraph and answer the following questions.

- A. Sugar exports will have to continue next year too and the government should facilitate higher exports, say industry sources.
- B. Exports are likely to be three million tonnes, according to data available with the Indian Sugar Mills' Association (ISMA).
- C. With deficit rains, sugar production may drop next season in Maharashtra and north Karnataka.
- D. The estimated sugar production this year (October 2018 to September 2019) is 32.9 million tonnes as against the domestic consumption of 26 million tonnes.

E. Even if there is a decline next year, the association expects the total production to be higher than the consumption.

F. It is one of the unprecedented years for the sugar industry in the country, as the sugar season of 2018-2019 is expected to end in September with a high closing stock of nearly 14.5 million tonnes.

Which of the following sentences can be inserted between the first and the second sentence after rearrangement without changing the meaning of the paragraph?

1. International price for sugar (white sugar) in the current season is nearly ₹10 a kg less compared to the domestic price.
2. Though sugar production in the next season might be lower compared with the current one, the focus of the industry and the government will largely be on reducing the inventory.
3. In an effort to encourage exports and to make them attractive, the government had not only fixed mill-wise export quota, but also linked some of the subsidy schemes to exports.
4. Yet, almost 35% of the industry did not participate for various reasons such as lack of adequate production or stringent conditions to avail the subsidy.
5. The industry has suggested to the government to make the export quota as an industry-wide quota, rather than mill-specific.

**Testbook Solution** Correct Option - 2

---

**Que. 77** Which of the following sentences can be inserted between the fourth and fifth sentence after rearrangement without changing the meaning of the paragraph?

1. The industry has suggested to the government to modify the subsidy schemes, so that they are WTO-compatible.
2. On the international front, next season, a deficit of nearly four million tonnes is expected.
3. There will be no delay in getting the subsidy and the cash flow will improve for the mills.
4. The policies of the government should attempt to solve both problems — cane price payment and sugar inventory.
5. The government had targeted five million tonnes for export.

**Testbook Solution** Correct Option - 5

---

**Que. 78** Which of the following is the correct order of sentences after rearrangement?

1. AEFCD
2. BFAECD
3. CBEFDA
4. FDBACE
5. DBAFCE

**Testbook Solution** Correct Option - 4

---

**Que. 79** Which of the following sentences is NOT out of context with reference to the correctly rearranged passage?

1. In 2009-10, total rice production in India amounted to 89.13 million tonnes, which was much less than the production of the previous year.
2. Fried foods and unhealthy beverages are major triggers for non-communicable diseases (NCDs) such as diabetes.
3. India has been struggling to export its surplus sugar because of high production costs.

4. Scientists think type 1 diabetes is caused by genes and environmental factors, such as viruses, that might trigger the disease.
5. Consuming too much sugar (or sugary foods and drinks) can make people put on weight which leads to type 2 diabetes in some people.

**Testbook Solution** Correct Option - 3

---

**Que. 80** Which of the phrases given below the sentence should replace the word/phrase given below in bold in the sentence to make it grammatically correct? If the sentence is correct as it is given and no correction is required, mark 'No correction required' as the answer.

"Who is your brother in the crowd?" my friend said.

1. Who are
2. Whom are
3. Whom is
4. Which is
5. no correction required

**Testbook Solution** Correct Option - 4

---

**Que. 81** In the given question, the sentence is divided into three parts I, II, and III. For each part, an alternate statement is also given. You have to determine if a part requires a correction and then mark that as your answer.

In this case, I was also/ requested as invite all of you so/ then you would please accompany me.

I. In this case, I were also

II. requested to invite all of you so

III. if you would please accompany me.

1. Only II
2. Only I
3. Only III
4. Both I and II
5. Both II and III

**Testbook Solution** Correct Option - 5

---

**Que. 82** In the question given below, the sentence is divided into three parts I, II, III. For each part, an alternate statement is also given. You have to determine if a part requires correction, and then mark that as your answer.

The U.S. was offering support to Saudi Arabia's campaign/ against the Houthi rebels in Yemen/ when Barack Obama is the president.

I. The U.S. offered support to Saudi Arabia's campaign

II. against a Houthi rebels in Yemen

III. when Barack Obama was the president.

1. Only I
2. Only II
3. Only III
4. Both I and III
5. Both II and III

**Testbook Solution** Correct Option - 4

---

**Que. 83**

**In the given question, the sentence is divided into three parts I, II, and III. For each part, an alternate statement is also given. You have to determine if a part requires a correction and then mark that as your answer.**

What could Jackson Mendelson do/ in one day if he had won the/ Parliamentary election just a day before his demise?

- I. What Jackson Mendelson did
- II. in one day if he won the
- III. Parliament election just a day before his demise?

- 1. Both I and II
- 2. Both I and III
- 3. Both II and III
- 4. Only I
- 5. Only II

**Testbook Solution** Correct Option - 5

---

**Que. 84** A sentence/ a part of the sentence is underlined. Five alternatives are given to the underlined part which will improve the meaning of the sentence. Choose the correct alternative. In case no improvement is needed. Click the option corresponding to "No improvement".

Little knowledge of medicine that he possessed proved to be a blessing for him when his brother was in great pain.

- 1. a little
- 2. the little
- 3. few
- 4. a few
- 5. No Improvement

**Testbook Solution** Correct Option - 2

---

**Que. 85** A sentence/ a part of the sentence is underlined. Five alternatives are given to the underlined part which will improve the meaning of the sentence. Choose the correct alternative. In case no improvement is needed. Click the option corresponding to "No improvement".

If he were you I would have given him my books.

- 1. had given
- 2. has given
- 3. give
- 4. will give
- 5. No Improvement

**Testbook Solution** Correct Option - 3

---

**Que. 86** Select the phrase/connector from the given three options which can be used to form a single sentence from the two sentences given below, implying the same as expressed in the statement sentence.

The Industrial Revolution was a shift from the agrarian society. People migrated from villages in search of jobs to places where factories were established.

- 1. Which the Industrial Revolution
  - 2. As the Industrial Revolution
  - 3. And people migrated
- 1. Only 1

2. Only 2
3. Only 3
4. Both 1 and 3
5. Both 2 and 3

**Testbook Solution** Correct Option - 2

---

**Que. 87** Select the phrase/connector from the given three options which can be used to form a single sentence from the two sentences given below, implying the same as expressed in the statement sentences.

The Cabinet has decided to raise salaries and pensions for more than one crore government employees and pensioners by implementing the Seventh Pay Commission's recommendations. It will impart a fillip to consumption demand and economic growth.

1. With a view to imparting
2. In spite of the Cabinet's decision
3. The Cabinet's decision to raise
  1. Only 3
  2. Only 2
  3. Only 1
  4. Both 1 and 2
  5. None of these

**Testbook Solution** Correct Option - 1

---

**Que. 88** Select the phrase/connector from the given three options which can be used to form a single sentence from the two sentences given below, implying the same as expressed in the statement sentences.

The land belonging to your father does not satisfy the exclusion criteria stated in the definition of capital asset. The gain arising from the sale of the agricultural land by your father would be taxable.

1. As though the gain
2. Assuming that the land
3. As soon as the gain
  1. Only 1
  2. Only 2
  3. Only 3
  4. Both 2 and 3
  5. All of the above.

**Testbook Solution** Correct Option - 2

---

**Que. 89** Directions: In the following question, the word at the top is used in five different ways. Choose the option in which the usage of the word is incorrect or inappropriate.

**WAVE**

1. I was **waving** my hand like mad but he never once looked in my direction.
2. You'll have to wait till the policeman **waves** the car on.
3. You can't just **wave** me away as if I were a child!



4. They **waved** at us as we drove by.
5. Will you help me **wave** this table to the back room?

**Testbook Solution** Correct Option - 5

---

**Que. 90** Given below is a word, followed by three sentences which consist of that word. Identify the sentence(s) which best express(es) the meaning of the word. Choose option 5 'None of these' if the word is not suitable in any of the sentences.

DERIDE

- A. In the upcoming elections, the allegation is expected to feature prominently in the Democrats' attempts to **deride** the Trump administration's values-bereft, transactional conduct of U.S. foreign policy.
- B. There is an urgent need for a quantum jump in public expenditure on education in order to fill wide gaps in infrastructure, training and retraining of teachers and to **deride** a strong follow up on the quality of education.
- C. A recent Intergovernmental Panel on Climate Change report has warned India of the seriousness of climate change and its **deride** adverse impact on the environment and the livelihood of masses.
1. Only C
  2. Both A and B
  3. Both A and C
  4. Only A
  5. None of these

**Testbook Solution** Correct Option - 4

---

**Que. 91** Given below is a word, followed by three sentences which consist of that word. Identify the sentence(s) which best express(es) the meaning of the word. Choose option 5 'None of these' if the word is not suitable in any of the sentences.

NEFARIOUS

- A. Pakistani military units have been stationed in these countries to promote **nefarious** stability.
- B. Party-political secularism, born around 40 years ago, is a **nefarious** doctrine practised by all political parties, including the so-called 'secular forces'.
- C. The committee suggested making the directorate of ports as a **nefarious** agency and the AP Inland Vessel Rules were brought into effect.
1. Both A and B
  2. Only C
  3. Both A and C
  4. Only B
  5. None of these

**Testbook Solution** Correct Option - 4

---

**Que. 92** Given below is a word, followed by three sentences which consist of that word. Identify the sentence(s) which best express(es) the meaning of the word. Choose option 5 'None of these' if the word is not suitable in any of the sentences.

ALLUSION

- A. There are lots of literary echoes and **allusions** in the novel, but they don't do anything for the tired texture of the prose.
- B. He made some **allusion** to the years they lived apart.
- C. The video game is designed to give the **allusion** that you are in control of an airplane.
1. Both A and C

2. Both A and B
3. Only B
4. Both B and C
5. None of these

**Testbook Solution** Correct Option - 2

---

**Que. 93** Direction: Read the passage given below and answer the following questions.

Artificial intelligence is as abstract as thought, written in computer code, but people imagine AI embodied in humanoid form. Robotic hardware has a lot of catching up to do, however. Realistic, AI-generated avatars will have AI-generated conversations and sing AI-generated songs, and even teach our children. Deepfakes also exist, where the face and voice of one person, for example, is transposed onto a video of another. We've also seen realistic AI-generated faces of people who don't exist. Researchers are working on combining the technologies to create realistic 2D avatars of people who can interact in real-time, showing emotion and making context-relevant gestures. A Samsung-associated company called Neon has introduced an early version of such avatars, though the technology has a long way to go before it is practical to use. Such avatars could help revolutionize education. Artificial intelligence researchers are already developing AI tutoring systems that can track student behavior, predict their performance and deliver content and strategies to both improve that performance and prevent students from losing interest. AI tutors hold the promise of truly personalized education available to anyone in the world with an Internet-connected device — provided they are willing to surrender some privacy. "Having a visual interaction with a face that expresses emotions, that expresses support, is very important for teachers," said Yoshua Bengio, a professor at the University of Montreal and the founder of Mila, an artificial intelligence research institute. Korbit, a company founded by one of his students, Iulian Serban, and Riiid, based in South Korea, are already using this technology in education, though Bengio says it may be a decade or more before such tutors have natural language fluidity and semantic understanding. There are seemingly endless ways in which artificial intelligence is beginning to touch our lives, from discovering new materials to new drugs — AI has already played a role in the development of COVID-19 vaccines by narrowing the field of possibilities for scientists to search — to picking the fruit we eat and sorting the garbage we throw away. Self-driving cars work, they're just waiting for laws and regulations to catch up with them.

**Practical**

Synonym: \_\_\_\_\_, Antonym: \_\_\_\_\_

1. Real, Actual
2. Impracticable, Inaccessible
3. Inapplicable, Real
4. Pragmatic, Idealist
5. Applicable, Actual

**Testbook Solution** Correct Option - 4

---

**Que. 94** Direction: Identify the correct statements with reference to the passage.

I: Deepfake is used to replace the likeness of one person with another in video and other digital media.

II: Artificial Intelligence can help revolutionize Education.

III: 2D avatars are developed to have recorded interaction.

1. Only I
2. Only I and II
3. Only II and III
4. Only I and III
5. Only III

**Testbook Solution** Correct Option - 2

---

**Que. 95** Direction: Identify the correct statements with reference to the passage.

I: AI tutoring system can help in tracking the behaviour of the student and help in improving their performances too.

II: Artificial Intelligence has a very limited application.

III: Korbit is using Artificial Intelligence in Education.

1. Only I and III
2. Only II and I
3. Only I
4. Only II and III
5. Only II

**Testbook Solution** Correct Option - 1

---

**Que. 96** AI-generated face refers to-

1. Creating real faces using AI technology.
2. Creating computer codes
3. Creating natural environment using AI technology
4. Creating Artificial humans using AI technology
5. Creating fake faces using AI technology

**Testbook Solution** Correct Option - 5

---

**Que. 97** According to you, how can real 2D avatars help in education?

1. They can provide visual interaction which will help teachers in better interaction with students.
2. 2D avatars are built to tutor Teachers.
3. They can provide vague interaction which will help teachers in better interaction with students.
4. 2D avatars are not built to help tutoring the students.
5. None of the above.

**Testbook Solution** Correct Option - 1

---

**Que. 98** **Directions: Read the following sentence and determine whether there is an error in it. The error, if any, will be in one part of the sentence. If the sentence is error-free, select 'No Error' as your answer.**

The Delhi government has come up (A) with a plan that aims at making nearly 70 (B) essential transport services completely online (C) in two phases over the next few months. (D)

1. A
2. B
3. C
4. D
5. No Error

**Testbook Solution** Correct Option - 5

---

**Que. 99** **Directions: Read the following sentence and determine whether there is an error in it. The error, if any, will be in one part of the sentence. If the sentence is error-free, select 'No Error' as your answer.**

India has delivered the (A) second consignment of heavy equipment, (B) including two 100-tonne mobile(C) cranes, to Iran's Chabahar port. (D)

1. A

2. B
3. C
4. D
5. No Error

**Testbook Solution** Correct Option - 5

---

**Que. 100** **Directions:** Read the following sentence and determine whether there is an error in it. The error, if any, will be in one part of the sentence. If the sentence is error-free, select 'No Error' as your answer.

The task force were (A) given the goal of catching (B) the rogue agent who was (C) working for a terrorist. (D)

1. A
2. B
3. C
4. D
5. No Error

**Testbook Solution** Correct Option - 1

---

**Que. 101** **Direction:** Read the following information carefully and answer the following questions

In a school consisting of 700 students, a sports event is organized. There are a total of 4 sports i.e Baseball, Cricket, Hockey and Basketball. Each student participated in one sport.

- i) Ratio between the number of boys and girls who participated in Cricket is 11 : 13 and that of Hockey is 15 : 13.
- (ii) The number of girls who participated in baseball is 20 less than the number of boys and the number of boys who participated in cricket is 35 more than the number of boys who participated in Hockey.
- (iii) The ratio between the number of boys and girls who participated in Basketball is 5 : 3
- (iv) The ratio of the number of girls and boys who participated in baseball is 7 : 9 and the difference between the number of boys and girls who participated in cricket is 20.

The number of boys who participated in baseball and cricket together is what percentage of number of girls who participated in the same sports?

1. 100%
2. 75%
3. 45%
4. 125%
5. 130%

**Testbook Solution** Correct Option - 1

---

**Que. 102** The number of children(both boys and girls) who participated in Hockey is what percentage less than the number of children who participated in Basketball?

1. 15%
2. 12.5%
3. 16.25%
4. 6.25%
5. 33.33%

**Testbook Solution** Correct Option - 2

**Que. 103** If 30% of boys and 20% of girls who participated in baseball were disqualified, then the what is the ratio between the number of disqualified children and remaining children?

1. 36 : 101
2. 22 : 117
3. 66 : 119
4. 41 : 101
5. 41 : 119

**Testbook Solution** Correct Option - 5

---

**Que. 104** What is the difference between the number of girls who participated in cricket and hockey together and number of girls who participated in remaining sports?

1. 55
2. 45
3. 105
4. 65
5. 125

**Testbook Solution** Correct Option - 4

---

**Que. 105** What is the difference between the average number of boys and average number of girls participated in the event?

1. 12.5
2. 8.25
3. 9.5
4. 5.5
5. 15.5

**Testbook Solution** Correct Option - 1

---

**Que. 106** In the following number series, a wrong number is given. Find out the wrong number.  
142, 141, 137, 118, 112, 87

1. 112
2. 87
3. 137
4. 118
5. 142

**Testbook Solution** Correct Option - 4

---

**Que. 107** In the following number series, a wrong number is given. Find out the wrong number.  
5, 9, 26, 103, 514, 3084

1. 9
2. 26
3. 103
4. 514
5. 3084

**Testbook Solution** Correct Option - 5

**Que. 108**

In the following number series, a wrong number is given. Find out the wrong number.  
2, 7, 17, 32, 50, 77

1. 2
2. 7
3. 50
4. 77
5. 17

**Testbook Solution** Correct Option - 3

---

**Que. 109**

In the following number series, a wrong number is given. Find out the wrong number.  
536, 500, 475, 460, 450, 446

1. 536
2. 475
3. 460
4. 450
5. 446

**Testbook Solution** Correct Option - 3

---

**Que. 110**

In each of the following number series, the wrong number is given, find out that number.  
171, 172, 346, 1031, 4168, 20845

1. 171
2. 1031
3. 4168
4. 20845
5. 346

**Testbook Solution** Correct Option - 2

---

**Que. 111**

In each of the following number series, the wrong number is given, find out that number.  
140, 141, 133, 160, 106

1. 106
2. 133
3. 141
4. 140
5. 160

**Testbook Solution** Correct Option - 1

---

**Que. 112**

In the given question, two equations numbered I and II are given. Solve both the equations and mark the appropriate answer.

I.  $x^2 - 11x + 24 = 0$

II.  $y^2 - 13y + 40 = 0$

1.  $x > y$
2.  $x < y$
3.  $x \geq y$
4.  $x \leq y$

5.  $x = y$  or relation between  $x$  and  $y$  can not be established.

**Testbook Solution** Correct Option - 5

---

**Que. 113** Two equations I and II are given below in question. You have to solve these equations and give the answer.

I.  $x^2 - 16x + 63 = 0$

II.  $y^2 - 13y + 42 = 0$

1.  $x < y$
2.  $x > y$
3.  $x \leq y$
4.  $x \geq y$
5.  $x = y$  or the relation between  $x$  and  $y$  can't be established.

**Testbook Solution** Correct Option - 4

---

**Que. 114** In the given questions, two equations numbered I and II are given. You have to solve both the equations and mark the appropriate answer.

I.  $3x^2 - 14x + 15 = 0$

II.  $15y^2 - 34y + 15 = 0$

1.  $x \leq y$
2.  $x > y$
3.  $x \geq y$
4. No relation in  $x$  and  $y$  or  $x = y$
5.  $x < y$

**Testbook Solution** Correct Option - 3

---

**Que. 115** Two equations I and II are given below in question. You have to solve these equations and give the answer.

I.  $x^2 + 8x - 65 = 0$

II.  $y^2 + 2y - 99 = 0$

1.  $x < y$
2.  $x > y$
3.  $x \leq y$
4.  $x \geq y$
5.  $x = y$  or the relation between  $x$  and  $y$  can't be established.

**Testbook Solution** Correct Option - 5

---

**Que. 116** In the given question, two equations numbered I and II are given. Solve both the equations and mark the appropriate answer.

I.  $x^2 - 29x + 100 = 0$

II.  $y^2 - 52y + 100 = 0$

1.  $x > y$
2.  $x < y$
3.  $x \leq y$
4.  $x \geq y$

5.  $x = y$  or relationship between  $x$  and  $y$  cannot be established.

**Testbook Solution** Correct Option - 5

---

**Que. 117** In the given question, two equations numbered I and II are given. Solve both the equations and mark the appropriate answer.

I.  $x^2 + x - 210 = 0$

II.  $y^2 + 3y - 130 = 0$

1.  $x > y$
2.  $x < y$
3.  $x \geq y$
4.  $x \leq y$
5.  $x = y$  or relationship between  $x$  and  $y$  cannot be established

**Testbook Solution** Correct Option - 5

---

**Que. 118** What approximate value will come in the place of question mark '?' in the following question?  
 $206.123 \times 37.02 - 91 \times 4 + 59.99 \times 27.01 = ?$

1. 8878
2. 8678
3. 8898
4. 8868
5. 8858

**Testbook Solution** Correct Option - 1

---

**Que. 119** What approximate value will come in the place of question mark '?' in the following question?  
 $43.84 - 89.99 + 738.12 \div 9 \times 3 = ?$

1. 200
2. 300
3. 400
4. 500
5. 600

**Testbook Solution** Correct Option - 1

---

**Que. 120** What approximate value will come in the place of question mark '?' in the following question?  
 $(1872.28/38.96) + 1299.8 - 2430 + 1215 = ?$

1. 133
2. 143
3. 153
4. 163
5. 173

**Testbook Solution** Correct Option - 1

---

**Que. 121** What approximate value will come in the place of the question mark '?' in the following question?

$80.20\% \text{ of } 900 \div 8.02 = 4589.96 \div ?$



1. 51
2. 60
3. 40
4. 32
5. 96

**Testbook Solution** Correct Option - 1

---

**Que. 122** What approximate value will come in the place of question mark ‘?’ in the following question?  
 $108.23 \times 36.01 - 90.23 \times 4 + 56.98 \times 27 = ?$

1. 5687
2. 5067
3. 5664
4. 5247
5. 5987

**Testbook Solution** Correct Option - 2

---

**Que. 123** Each question below is followed by two statements I and II. You have to determine whether the data given in the statements are sufficient for answering the question. You should use the data and your knowledge of Mathematics to choose the best possible answer.

Find the Marked Price of Article A.

I. The Selling Price of Article A is 25% of the Selling Price of Article B.

II. The cost price of the Article A is Rs. 300. When a discount of 25% is given on the marked price of the Article, the loss incurred is 10%.

1. If the data in **statement I alone is sufficient** to answer the question, while the data in statement II alone are not sufficient to answer the question.
2. If the data in **statement II alone is sufficient** to answer the question, while the data in statement I alone are not sufficient to answer the question.
3. If the data either in **statement I alone or in statement II alone is sufficient** to answer the question.
4. If the data even in both the **statements I and II together are not sufficient** to answer the question.
5. If the data in both **statements I and II together are needed** to answer the question.

**Testbook Solution** Correct Option - 2

---

**Que. 124** Each question below is followed by two statements I and II. You have to determine whether the data given in the statements are sufficient for answering the question. You should use the data and your knowledge of Mathematics to choose the best possible answer.

In how many days A will complete the work alone?

I. B and C alone can complete the work in 12 and 15 days respectively.

II. Together A, B and C can complete the work in 4 days.

1. If the data in **statement I alone is sufficient** to answer the question, while the data in statement II alone are not sufficient to answer the question.
2. If the data in **statement II alone is sufficient** to answer the question, while the data in statement I alone are not sufficient to answer the question.
3. If the data either in **statement I alone or in statement II alone is sufficient** to answer the question.
4. If the data even in both the **statements I and II together are not sufficient** to answer the question.
5. If the data in both **statements I and II together are needed** to answer the question.

**Testbook Solution** Correct Option - 5

**Que. 125** Each question below is followed by two statements I and II. You have to determine whether the data given in the statements are sufficient for answering the question. You should use the data and your knowledge of Mathematics to choose the best possible answer.

Find the difference of number of Females in 2020 and the number of Males in 2019?

I. The ratio of number of Males to Females in 2019 is 3 : 2 and the difference between number of males and females in 2019 is 500.

II. The ratio of number of Males and Females in 2020 is 6 : 5 and there is 20% growth in the number of Males in 2020 as compared to 2019.

1. If the data in **statement I alone is sufficient** to answer the question, while the data in statement II alone are not sufficient to answer the question.
2. If the data in **statement II alone is sufficient** to answer the question, while the data in statement I alone are not sufficient to answer the question.
3. If the data either in **statement I alone or in statement II alone is sufficient** to answer the question.
4. If the data even in both the **statements I and II together are not sufficient** to answer the question.
5. If the data in both **statements I and II together are needed** to answer the question.

**Testbook Solution** Correct Option - 5

**Que. 126** **Direction:** The following question is accompanied by two statements (I) and (II). You have to determine which statements(s) is/are sufficient/necessary to answer the questions.

Find the initial quantity of milk in jar A.

I. Ratio of the Milk and water in Jar A and B is 3 : 2 and 4 : 3 respectively.

II. 28 liters of the mixture of B is poured into A and then the ratio of the Milk and water in Jar A becomes 17 : 12.

1. If the data in **statement I alone is sufficient** to answer the question, while the data in statement II alone are not sufficient to answer the question.
2. If the data in **statement II alone is sufficient** to answer the question, while the data in statement I alone are not sufficient to answer the question.
3. If the data either in **statement I alone or in statement II alone is sufficient** to answer the question.
4. If the data even in both the **statements I and II together are not sufficient** to answer the question.
5. If the data in both **statements I and II together are needed** to answer the question.

**Testbook Solution** Correct Option - 5

**Que. 127** **Directions:** In the following question, two statements are numbered as Statement I and II. On solving these statements we get Quantity I and II respectively. Solve the given statements for both quantities and choose the correct option.

I: Pipe A can fill the tank in 2 hours and pipe B can fill it in 3 hours. Find how long it will take to fill the tank when both work together.

II: Two buckets are used to fill a tank. The red bucket is twice the size of the blue bucket. If the red and blue bucket takes 3 hours to fill the tank together, find how long will the blue bucket take to fill the tank?

1. Quantity I > Quantity II
2. Quantity I < Quantity II
3. Quantity I  $\geq$  Quantity II
4. Quantity I  $\leq$  Quantity II
5. Quantity I = Quantity II, or relation cannot be established.

**Testbook Solution** Correct Option - 2

**Que. 128** There are 18 books in a library whose average cost is Rs. 9000. Out of which 3 books A, B and C are taken out in which A's price is 25% more than B and C's price is 25% less than B. Find the

price of C if the average of remaining books is Rs. 7000.

1. Rs. 8375
2. Rs. 11,225
3. Rs. 13,340
4. Rs. 16,830
5. Rs. 14,250

**Testbook Solution** Correct Option - 5

---

**Que. 129** The average salary of 10 employees was found to be Rs 20,000. Later on, it was found that the salary of two employees was recorded as Rs 2,000 and Rs 2,500 instead of Rs 20,000 and Rs 5,200. Find the correct average salary.

1. Rs 23270
2. Rs 20870
3. Rs 22070
4. Rs 24170
5. Rs 25070

**Testbook Solution** Correct Option - 3

---

**Que. 130** In an election two candidates, Ramya and Urmila were competing. On the election day, 12% voters didn't cast their vote, out of the remaining votes 15% were declared invalid. Now Urmila won the election by 5000 votes and she got 19,330 votes. What was the total number of voters initially?

1. 40,000
2. 35,000
3. 28,000
4. 45,000
5. 50,000

**Testbook Solution** Correct Option - 4

---

**Que. 131** In a factory ratio between the number of men to women is 3 : 2. One certain day 18 men and 7 women were absent due to bad weather and the ratio between men and women became 9 : 7. What is the actual number of women in the factory?

1. 46
2. 34
3. 78
4. 42
5. 54

**Testbook Solution** Correct Option - 4

---

**Que. 132** A dealer marks an article 50% above the cost price and sells it to a customer allowing two successive discounts of 20% and 15% on the marked price. if he gains Rs. 400 on the deal then the cost price of the article is?

1. Rs. 25,000
2. Rs. 30,000
3. Rs. 20,000
4. Rs. 15,000
5. None of these

**Testbook Solution** Correct Option - 3

---

**Que. 133** The ratio of the ages of Khushi and her Aunt is 1 : 4 and the ratio of the ages of Khushi's Aunt and her brother is 9 : 1. If Khushi's brother is 5 years younger than Khushi. What will be the age of Khushi's Aunt after 6 years?

1. 36 years
2. 38 years
3. 42 years
4. 40 years
5. 44 years

**Testbook Solution** Correct Option - 3

---

**Que. 134** A, B and C enter into a partnership investing Rs. 35000, Rs. 45000, and Rs. 55000 respectively. The respective shares of A, B and C in an annual profit of Rs. 40,500 are

1. Rs. 10500, Rs. 13000, Rs. 17000
2. Rs. 10500, Rs. 13500, Rs. 16500
3. Rs. 13500, Rs. 10500, Rs. 16500
4. Rs. 16500, Rs. 13500, Rs. 10500
5. Answer not known

**Testbook Solution** Correct Option - 2

---

**Que. 135** The loss incurred by selling the leman set for Rs.1280 is equal to the profit earned by selling same for Rs.1920. At what price should the leman set be sold to make 25% profit?

1. Rs. 2000
2. Rs. 1900
3. Rs. 2100
4. Rs. 2150
5. None of these

**Testbook Solution** Correct Option - 1

---

**Que. 136** Two trains a superfast express and a passenger train having lengths 580 m and 470 m are travelling towards each other with the speeds of 80 km/h and 46 km/h respectively. Find the time taken to cross each other.

1. 45 seconds
2. 20 seconds
3. 25 seconds
4. 30 seconds
5. 35 seconds

**Testbook Solution** Correct Option - 4

---

**Que. 137** Tarun can row a boat upstream for 27 km in 3 hours and downstream for 99 km in 3 hours. If Tarun rows a distance of 42 km in still water and a distance of 66 km downstream, what is the total time taken?

1. 6 hours
2. 2 hours
3. 5 hours

4. 4 hours
5. 3 hours

**Testbook Solution** Correct Option - 4

---

**Que. 138** Simple interest accrued on the amount of Rs.14,000 is Rs. 1260 at the rate of 3 % per annum for t years. What would be the compound interest accrued on the same amount for the same years at 10 % per annum compounded annually?

1. Rs.4634
2. Rs.4458
3. Rs.4534
4. Rs.1256
5. Rs.1675

**Testbook Solution** Correct Option - 1

---

**Que. 139** In one alloy, there is 50% steel in its total mass, while it is 75% in another alloy. 15 kg of the first alloy was melted together with 10 kg of the second one to form a third alloy. Find the percentage of steel in the new alloy when it is known that 20% of the total steel is getting diminished during the melting process?

1. 60%
2. 50%
3. 55%
4. 40%
5. 35%

**Testbook Solution** Correct Option - 3

---

**Que. 140** A can print one lakh of books in 8 hours, B can print the same number of books in 10 hours while C can print them in 12 hours. All started working at 9 A.M. while A is closed at 11 A.M. and the remaining work was completed by B and C. Approximately at what time will the work (to print one lakh books) to be finished?

1. 2:30 PM
2. 1:00 PM
3. 1: 00 AM
4. 2 :00 PM
5. 12 : 00 Noon

**Testbook Solution** Correct Option - 2

---

**Que. 141** Parliament passed the Deposit Insurance and Credit Guarantee Corporation (Amendment) Bill, 2021 ensuring that account holders get up to \_\_\_\_\_ within 90 days of the RBI imposing a moratorium on the banks.

1. Rs. 15 lakh
2. Rs. 10 lakh
3. Rs. 5 lakh
4. Rs. 2 lakh
5. Rs. 12 lakh

**Testbook Solution** Correct Option - 3

---

**Que. 142** A cash credit account will become NPA if it \_\_\_\_\_

- 
1. Remains out of order for more than 90 days
  2. Stock statement not submitted for 60 days
  3. Account not reviewed for 3 months
  4. All of the above
  5. None of the above

**Testbook Solution** Correct Option - 1

---

**Que. 143** Which of the following banks is formed by merging the 3 banks Bank of Bengal, the Bank of Bombay and Bank of Madras?

1. State Bank of India
2. RBI
3. Bank of India
4. SIDBI
5. Imperial Bank of India

**Testbook Solution** Correct Option - 5

---

**Que. 144** Which of the following is known as Plastic money?

- i) Demand Draft
  - ii) Credit Card
  - iii) Debit Card
1. Only i)
  2. Only ii)
  3. Only iii)
  4. Both ii) and iii)
  5. All i), ii) and iii)

**Testbook Solution** Correct Option - 4

---

**Que. 145** Who assumed the role of President of World Bank?

1. Jim Yong Kim
2. Boyko Borisov
3. Günther Oettinger
4. David Malpass
5. Irina Bokova

**Testbook Solution** Correct Option - 4

---

**Que. 146** As per the newly constituted Digital Payments Index (RBI-DPI), Digital payment has the growth of what percentage in FY 21? (July)

1. 15.6%
2. 35.9%
3. 30.2%
4. 25.6%
5. 20.9%

**Testbook Solution** Correct Option - 3

---

**Que. 147** Which among the following are the types of mutual funds?

1. Equity funds
2. Debt funds
3. Hybrid funds
4. Both (1) and (2) are true
5. All (1), (2) and (3) are true

**Testbook Solution** Correct Option - 5

---

**Que. 148** Which of the following given options is not the type of Fiscal bill presented by the Government of India?

1. 728 days
2. 91 days
3. 182 days
4. 364 days
5. None of these

**Testbook Solution** Correct Option - 1

---

**Que. 149** Which among the following is the first bank to start internet banking services in India?

1. Punjab National Bank
2. State Bank of India
3. HDFC Bank
4. HSBC Bank
5. None of the above

**Testbook Solution** Correct Option - 5

---

**Que. 150** What is Consumer price index (CPI)?

1. It measures changes in the price level of a market basket of consumer goods and services purchased by households.
2. Is a tool used by collectors and investors to track values of collectibles against collectors market from a specific date, calculated in form of Index. It measures the value of a section of the collectors market and computed from the prices of selected collectibles, typically a weighted average.
3. It measures changes in the prices paid for goods and services used in crop and livestock production and family living.
4. A theoretical price index that measures relative cost of living over time or regions.
5. A quarterly economic series detailing the changes in the costs of labor for businesses in the country

**Testbook Solution** Correct Option - 1

---

**Que. 151** What is White label ATM?

1. ATM set up by Commercial Banks
2. ATM set up by Scheduled Banks
3. ATM set up by Non-Banks.
4. ATM Franchise set up by Foreign Banks
5. None of these.

**Testbook Solution** Correct Option - 3

---

**Que. 152** An IPO is \_\_\_\_\_

1. Initial price offered by a private limited company to its shareholders
2. An offer by an unlisted company for sale of its shares for the first time to the public
3. Used to increase the share capital of an unlisted company
4. A book building process
5. None of the above

**Testbook Solution** Correct Option - 2

---

**Que. 153** Reserve Bank of India announced issue price for Sovereign Gold Bond Scheme 2021-22 - Series VI. When was Sovereign Gold Bond Scheme was launched?

1. 2016
2. 2017
3. 2018
4. 2015
5. 2019

**Testbook Solution** Correct Option - 4

---

**Que. 154** In MSF, S stands for?

1. Standing
2. Stand
3. System
4. Service
5. Stabilization

**Testbook Solution** Correct Option - 1

---

**Que. 155** Which among the following is the first payment banks of India?

1. Airtel Payments bank
2. Fino PayTech Limited
3. Vodafone m-pesa Limited
4. India Post Payment Bank
5. None of the above

**Testbook Solution** Correct Option - 1

---

**Que. 156** An electoral bond is like a promissory note that can be bought by any Indian citizen or company incorporated in India from select branches of the \_\_\_\_\_.

1. Axis Bank
2. Indian Bank
3. State Bank of India
4. BOI
5. HDFC Bank

**Testbook Solution** Correct Option - 3

---

**Que. 157** Where is the headquarters of Deposit Insurance and Credit Guarantee Corporation (DICGC) situated?

1. Hyderabad
2. Delhi



3. Chennai
4. Mumbai
5. Kolkata

**Testbook Solution** Correct Option - 4

---

**Que. 158** When is World Lion Day celebrated every year?

1. 8 August
2. 9 August
3. 10 August
4. 11 August
5. 12 August

**Testbook Solution** Correct Option - 3

---

**Que. 159** What is the currency of Israel?

1. Rial
2. Dinar
3. Real
4. Togrog
5. Shekel

**Testbook Solution** Correct Option - 5

---

**Que. 160** In June 2021, Prime Minister Narendra Modi visited which state to inaugurate a Zen Garden and Kaizen Academy at Ahmedabad Management Association (AMA)?

1. Tamil Nadu
2. Gujarat
3. Punjab
4. Bihar
5. Haryana

**Testbook Solution** Correct Option - 2

---

**Que. 161** Foreign investors have pumped in around how many rupees into the Indian capital markets in August 2021?

1. 12,100
2. 13,300
3. 14,500
4. 15,700
5. 16,900

**Testbook Solution** Correct Option - 3

---

**Que. 162** Who among the following is the author of the collection of poetry called Golden Threshold?

1. Sarojini Naidu
2. Annie Besant
3. Aruna Asaf Ali
4. Vijaya Lakshmi Pandit
5. None of these

**Testbook Solution** Correct Option - 1

---

**Que. 163** What is the full form of EMV?

1. Electronic mobility value
2. Euro money vendors
3. Euro, Mastercard and Visa
4. Europay, Mastercard and Visa
5. Electronic Master Vehicle

**Testbook Solution** Correct Option - 4

---

**Que. 164** Which of the following is the first bank that introduced ATM in India?

1. SBI
2. HSBC
3. ICICI
4. IDFC
5. None of these

**Testbook Solution** Correct Option - 2

---

**Que. 165** Which of the following has become the 6000th station to be commissioned with Wi-Fi by Indian Railways?

1. Argora railway station
2. Bokaro Steel City railway station
3. Hazaribagh railway station
4. Deoghar railway station
5. Kokpara railway station

**Testbook Solution** Correct Option - 3

---

**Que. 166** AU small finance bank tagline

1. Your own bank, Banking that's twice as good'
2. 'Prosperity for all'
3. Faithful and friendly
4. Badhti ka naam zindagi
5. Chalo Aage Badhein

**Testbook Solution** Correct Option - 5

---

**Que. 167** SEBI has doubled the overseas investment limit of alternative investment funds and venture capital funds to how many US dollars?

1. 750
2. 1,000
3. 1,500
4. 1,750
5. 2,000

**Testbook Solution** Correct Option - 3

---

**Que. 168** Pension Fund Regulatory and Development Authority (PFRDA) is authorized by?

1. GOI
2. RBI
3. Ministry of Commerce
4. Ministry of Finance
5. SEBI

**Testbook Solution** Correct Option - 4

---

**Que. 169** How many countries of the world are currently members of the WTO?

1. 134
2. 167
3. 164
4. 198
5. 185

**Testbook Solution** Correct Option - 3

---

**Que. 170** Standard Chartered Bank headquarter is located at \_\_\_\_\_.

1. London
2. Paris
3. Washington
4. Moscow
5. Berlin

**Testbook Solution** Correct Option - 1

---

**Que. 171** In August 2021, with which country has India conducted their first-ever naval exercise named 'Al-Mohed Al-Hind 2021'?

1. UAE
2. Saudi Arabia
3. Oman
4. Jordan
5. Iraq

**Testbook Solution** Correct Option - 2

---

**Que. 172** Where is the headquarter of HSBC?

1. United Kingdom
2. United States
3. United Arab Emirates
4. People's Republic of China
5. Soviet Union

**Testbook Solution** Correct Option - 1

---

**Que. 173** Which of the following has signed an MoU with FICCI to establish a framework for collaboration for the development of Gujarat International Finance Tec-City (GIFT) IFSC as a world-class FinTech hub?

1. NASSCOM
2. IFSCA

3. CII
4. NITI Aayog
5. ASSOCHAM

**Testbook Solution** Correct Option - 2

---

**Que. 174** A total amount of over how many rupees (in crores) was sanctioned by the Ministry of Development of North Eastern Region (DoNER) for augmenting healthcare facilities in the eight northeastern states for effective management of COVID-19?

1. 150
2. 200
3. 250
4. 300
5. 350

**Testbook Solution** Correct Option - 3

---

**Que. 175** The 51st International Film Festival of India will pay tribute to the legendary filmmaker Satyajit Ray. Which of the following is/are among some of his classic films?

1. Pather Panchali
2. Charulata
3. Ghare Baire
4. Both 1 and 2
5. All 1, 2 and 3

**Testbook Solution** Correct Option - 5

---

**Que. 176** Competition Commission of India (CCI) has approved Zomato's request to acquire approximately how much per cent stake in the online grocery platform Grofers India and its wholesale entity Hands on Trades?

1. 6.1
2. 7.9
3. 8.4
4. 9.3
5. 10.5

**Testbook Solution** Correct Option - 4

---

**Que. 177** What is latest interest offered under Senior Citizen Savings Scheme?

1. 10.30%
2. 9.30%
3. 8.30%
4. 7.40%
5. 6.30%

**Testbook Solution** Correct Option - 4

---

**Que. 178** Which among the following are the participants in UPI transaction?

1. Payer PSP
2. Payee PSP

3. Beneficiary bank
4. NPCI
5. All of these.

**Testbook Solution** Correct Option - 5

---

**Que. 179** In April 2021, who has announced three significant changes for prepaid instruments (PPI)?

1. Vaibhav Chaturvedi
2. Shaktikanta Das
3. Divyaman S.
4. Mugunthan Sadagoban
5. Dharmendra Kachhawa

**Testbook Solution** Correct Option - 2

---

**Que. 180** Which of these banks have roped in Neeraj Chopra for a campaign?

1. RBI
2. SBI
3. Bank of India
4. HDFC Bank
5. IDBI Bank

**Testbook Solution** Correct Option - 1

---

**Que. 181** Which of the following insurance companies is not a subsidiary of India?

1. National Insurance Company Ltd
2. Oriental Insurance Company Ltd
3. The New India Assurance Company Ltd
4. United India Insurance Company Ltd
5. Iffco Tokio General Insurance Ltd

**Testbook Solution** Correct Option - 5

---

**Que. 182** Armand "Mondo" Duplantis confirmed his status as the best pole vaulter in the world after winning a gold medal at Tokyo Olympics. He did represent which country in the Tokyo Olympics?

1. USA
2. UK
3. Sweden
4. France
5. None of these

**Testbook Solution** Correct Option - 3

---

**Que. 183** What is the rank of India on the new Global Youth Development Index measuring the condition of young people across 181 countries?

1. 104
2. 110
3. 116
4. 122

5. 130

**Testbook Solution** Correct Option - 4

---

**Que. 184** As per the guidelines for licensing payments banks, a payments bank will initially be restricted to holding a maximum balance of Rs. \_\_\_\_\_ per individual customer.

1. 50,000
2. 2,00,000
3. 1,00,000
4. 10,00,000
5. 1,50,000

**Testbook Solution** Correct Option - 3

---

**Que. 185** Which of the following banks brought the ATM concept for the first time in India in 1987?

1. SBI
2. HDFC
3. IDBI
4. HSBC
5. ICICI

**Testbook Solution** Correct Option - 4

---

**Que. 186** LIC Cards Services Limited (LIC-CSL) has partnered with which of the following banks to launch 'Lumine' Platinum Credit Card and 'Eclat' Select Credit Card on the RuPay platform?

1. HDFC Bank
2. IDBI Bank
3. ICICI Bank
4. Yes Bank
5. Axis Bank

**Testbook Solution** Correct Option - 2

---

**Que. 187** The Appointments Committee of Cabinet (ACC) has approved the proposal to appoint Shanti Lal Jain as the new MD and CEO of which bank?

1. Allahabad Bank
2. HDFC Bank
3. Indian Bank
4. Bank of India
5. Indian Overseas Bank

**Testbook Solution** Correct Option - 3

---

**Que. 188** Which is the most unhappy country in the world according to World Happiness Report 2021?

1. South Sudan
2. Central African Republic
3. Afghanistan
4. Tanzania
5. Syria

**Testbook Solution** Correct Option - 3

---

**Que. 189** In context of P2P lending, which of the following statements is/are true?

1. A single lender can lend upto 1 crore over all lending platforms.
2. On a single platform, not more than 50,000 can be lent to a single borrower.
3. Maturity of loans cannot exceed 24 months.
4. A single borrower can borrow upto a maximum amount of 5 lakhs.
5. All of the above

**Testbook Solution** Correct Option - 2

---

**Que. 190** In August 2021, which of the following has been issued an insurance broking license from the Insurance Regulatory and Development Authority of India (IRDAI)?

1. Paytm
2. PhonePe
3. MobiKwik
4. Freecharge
5. Unified Payments Interface

**Testbook Solution** Correct Option - 2

---

**Que. 191** Who took charge as Union Minister of State in the Ministry of Corporate Affairs (MCA) in July 2021?

1. Dharmendra Pradhan
2. Rao Inderjit Singh
3. Pralhad Joshi
4. Shripad Naik
5. Arjun Ram Meghwal

**Testbook Solution** Correct Option - 2

---

**Que. 192** The annual FI-Index, released by RBI, for the period ending March 2021 is how much as against 43.4 for the period ending March 2017?

1. 45.3
2. 51.0
3. 53.9
4. 57.4
5. 61.5

**Testbook Solution** Correct Option - 3

---

**Que. 193** Which of the following defines 'Para Banking' services?

1. Eligible financial services rendered by banks
2. Services provided through business correspondents
3. Services provided to armed forces personnel
4. Utility services provided by banks
5. None of the above

**Testbook Solution** Correct Option - 4

---

**Que. 194** How many digits are there in Mobile Money Identifier (MMID)?

1. 4
2. 5
3. 6
4. 7
5. 10

**Testbook Solution** Correct Option - 4

---

**Que. 195** Recently, The Reserve Bank of India (RBI) has announced its bi-monthly monetary policy. What is current Reverse repo rate? (Aug)

1. 4%
2. 4.25%
3. 3.35%
4. 18%
5. 3.50%

**Testbook Solution** Correct Option - 3

---

**Que. 196** The presidency banks were amalgamated into a single bank, the Imperial Bank of India, in \_\_\_\_\_.

1. 1955
2. 1921
3. 1869
4. 1806
5. None of the above

**Testbook Solution** Correct Option - 2

---

**Que. 197** When was IDBI delinked from the RBI and taken over by Government of India?

1. 1976
2. 1977
3. 1978
4. 1980
5. None of these

**Testbook Solution** Correct Option - 1

---

**Que. 198** In August 2021, Ebrahim Raisi, a new President of which country has named Mohammad Mokhber as the first Vice President?

1. Afghanistan
2. Iraq
3. Iran
4. Turkmenistan
5. Serbia

**Testbook Solution** Correct Option - 3

---

**Que. 199** Which bank has signed an MoU with the Paralympic Committee of India (PCI) as one of the banking partners of the Paralympic Games?

1. Allahabad Bank



2. Indian Bank
3. Canara Bank
4. Bank of Baroda
5. Indian Overseas Bank

**Testbook Solution** Correct Option - 2

---

**Que. 200** Who is the author of the book titled "Life in the Clock Tower Valley"?

1. Aakash Ranison
2. Shakoor Rather
3. Kalki Koechlin
4. Jhumpa Lahiri
5. None of the above

**Testbook Solution** Correct Option - 2