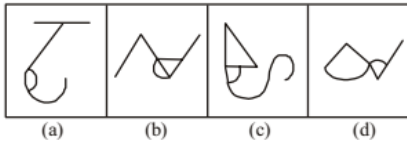


1. From the given answer figures, select the one in which the question figure is hidden/embedded in the same direction. (SSC CGL 1st Sit. 2010)

Question Figure:



Answer Figures:

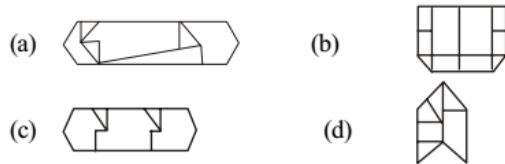


2. From the given answer figures, select the one in which the question figure is hidden/embedded. (SSC CGL 2nd Sit. 2010)

Questions Figure :



Answer Figures :

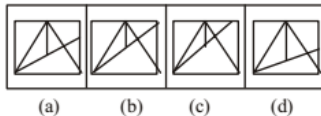


DIRECTIONS : From the given answer figures, select the one in which the question figure is hidden/embedded.

3. **Question Figure:** (SSC CGL 1st Sit. 2011)



Answer Figures:

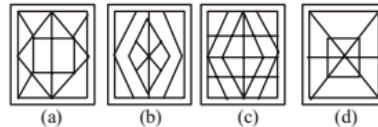


DIRECTIONS: From the given answer figures, select the one in which the question figure is hidden/ embedded.

4. **Question Figure** (SSC CGL 2nd Sit. 2011)

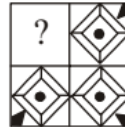


Answer Figures

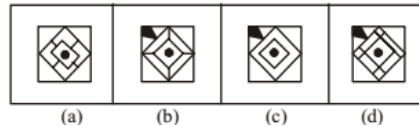


5. Which answer figure completes the form in question figure ? (SSC CGL 1st Sit. 2012)

Question Figures :

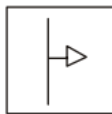


Answer figures :

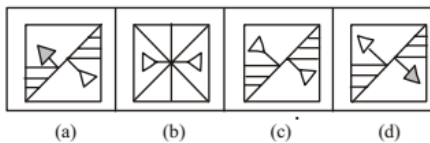


6. From the answer figures, select the one in which the question figure is hidden/embedded. (SSC CGL 1st Sit. 2012)

Question Figure :



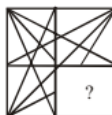
Answer Figures :



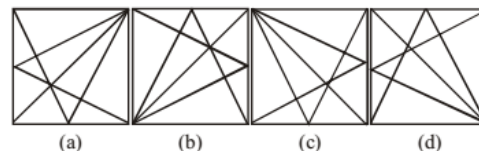
DIRECTIONS: In question no. 7, which answer figure will complete the question figure?

(SSC CGL 2nd Sit. 2012)

7. **Question Figure**



Answer Figures

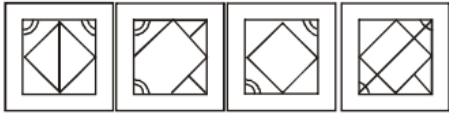


8. From the given answer figures, select the one in which the question figure is hidden/embedded

Question Figure



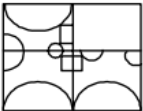
Answer Figures



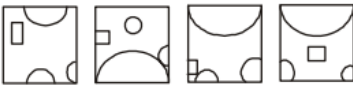
(a) (b) (c) (d)

DIRECTIONS: In the following questions, which answer figure will complete the question figure?

9. **Question Figure**



Answer Figure



(a) (b) (c) (d)

10. From the given answer figures, select the one in which the question figure is hidden/embedded.

Question Figure



Answer Figures



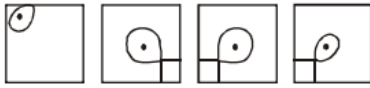
(a) (b) (c) (d)

DIRECTION (Q. 11) : In the following question which answer figure will complete the question figure?

11. **Question Figure**



Answer Figure



(a) (b) (c) (d)

12. From the given answer figures, select the one in which the question figure is hidden / embedded.

Question Figure



Answer Figures

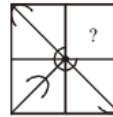


(a) (b) (c) (d)

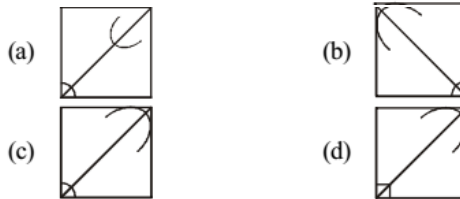
DIRECTIONS (Qs. 13 - 14) : Which answer figure completes the pattern given in the question figure?

(SSC CHSL 2012)

13. **Question Figure :**



Answer Figures :



14. **Question Figure :**



Answer Figures :



15. From the given answer figures, select the one in which the question figure is hidden/embedded. (SSC CHSL 2012)

Question Figure :



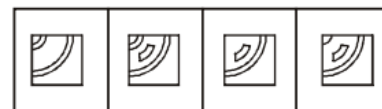
Answer Figures :



16. Find the answer figure which completes the question figure. (SSC Sub. Ins. 2012)



Answer Figures



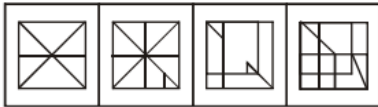
(a) (b) (c) (d)

17. Select the answer figure in which the question figure is hidden.
(SSC Sub. Ins. 2012)

Question Figure



Answer Figures



(a) (b) (c) (d)

DIRECTIONS (Qs. 18-19) : In each of the following questions, which answer figure will complete the question figure?

(SSC Sub. Ins. 2013)

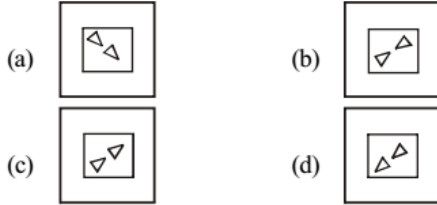
18. **Question Figure:**



19. **Question Figure :**



Answer Figures:



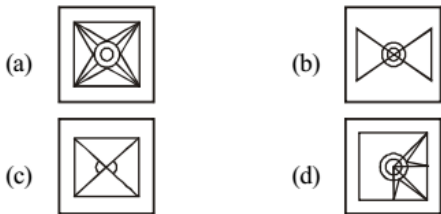
DIRECTIONS (Qs. 20-21) : In each of the following questions, select the answer figure in which the question figure is hidden/embedded.

(SSC Sub. Ins. 2013)


20. **Question Figure:**



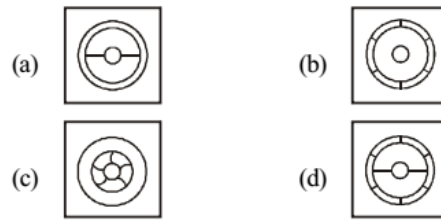
Answer Figures :



21. **Question Figure:**

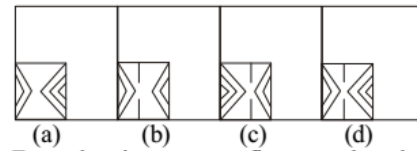


Answer Figures:



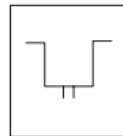
22. Which answer figure will complete the pattern in the question figure?
(SSC CHSL 2013)

Question figure:

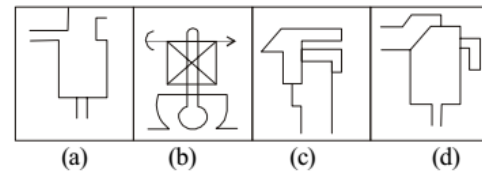


23. From the given answer figures, select the one in which the question figure is hidden/embedded.
(SSC CHSL 2013)

Question Figure :



Answer Figures:



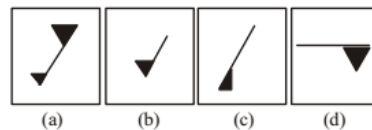
DIRECTIONS : In questions no. 24 to 26, which answer figure will complete the question figure?

(SSC CGL 1st Sit. 2013)


24. **Question Figure :**



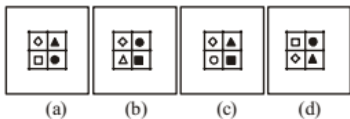
Answer Figures :



25. Question Figure :



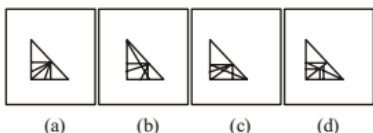
Answer Figures :



26. Question Figure :



Answer Figures :



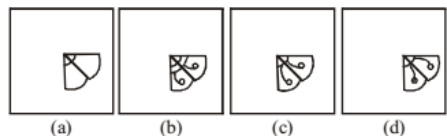
DIRECTIONS: In question nos. 27 and 28, which answer figure will complete the pattern in the question figure?

(SSC CGL 2nd Sit. 2013)

27. Question figure



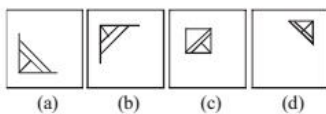
Answer figures



28. Question figure



Answer figures

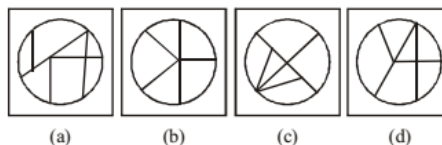


29. From the given answer figures, select the one in which the question figure is hidden/embedded.

Question Figure



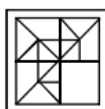
Answer Figures



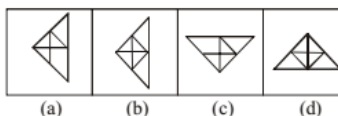
DIRECTIONS: In question no. 30 to 31, which answer figure will complete the pattern in the question figure?

(SSC CGL 1st Sit. 2013)

30. Question Figure:



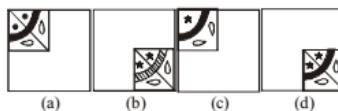
Answer Figure:



31. Question Figure:



Answer Figure:



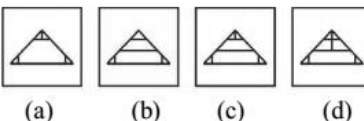
DIRECTIONS (Qs. 32-34) : Which answer figure will complete the pattern in the question figure?

(SSC CGL 1st Sit. 2013)

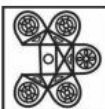
32. Question Figures :



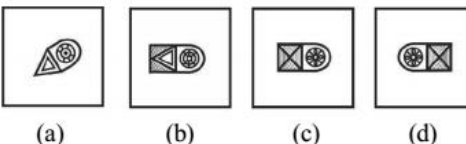
Answer Figures :



33. Question Figures :



Answer Figures :



34. Question Figures :



Answer Figures :




(a) (b) (c) (d)

35. Which one of the answer figures shall complete the given question figure ? (SSC CGL 1st Sit. 2013)

Question Figure :



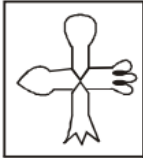
Answer Figures:



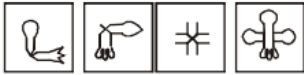
(a) (b) (c) (d)

36. Which one of the answer figures is hidden in the following question figure? (SSC CGL 1st Sit. 2013)

Question Figure :



Answer Figures.

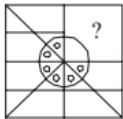


(a) (b) (c) (d)

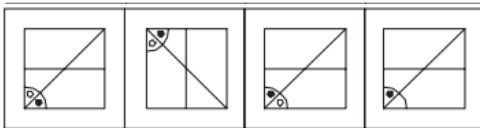
DIRECTIONS (Qs. 37-38): Which answer figure will complete the pattern in the question figure?

(SSC Stenographer 2013)

37. Question Figure :

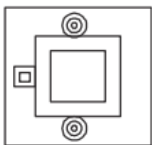


Answer Figure :

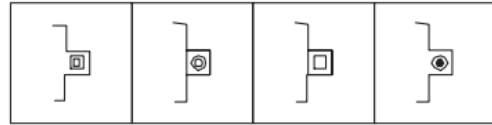


(a) (b) (c) (d)

38. Question Figure :




Answer Figure :

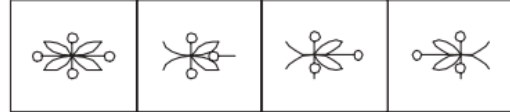


(a) (b) (c) (d)

39. Question Figure :



Answer Figure :

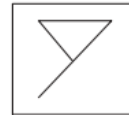


(a) (b) (c) (d)

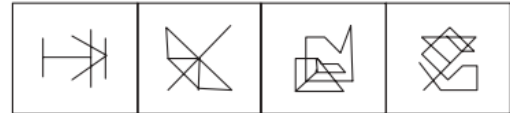
DIRECTIONS (Qs. 40-41): From the given answer figure, select the one in which the question figure is hidden/embedded.

40. Question Figure :

(SSC Stenographer 2013)



Answer Figure :

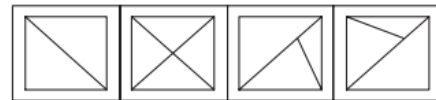


(a) (b) (c) (d)

41. Question Figure :



Answer Figure :

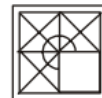


(a) (b) (c) (d)

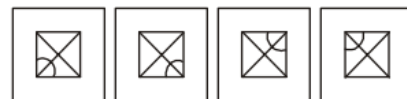
DIRECTIONS (Qs. 42-43): Which answer figure will complete the pattern in the question figure ?

(SSC CGL 1st Sit. 2014)

42. Question figure :



Answer figures :

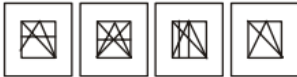


(a) (b) (c) (d)

43. Question figure :



Answer figures :



(a) (b) (c) (d)

44. From the given answer figures, select the figure which is hidden/embedded in the question figure.

Question figure :



Answer figures :



(a) (b) (c) (d)

45. Which answer figure will complete the pattern in the question figure? (SSC Sub. Ins. 2014)

Question Figure:



Answer Figure:



(a) (b) (c) (d)

46. From the given answer figures, select the one in which the question figure is hidden/embedded.

Question Figure:



Answer Figures:



(a) (b) (c) (d)

47. From the given answer figures, select the one in which the question figure is hidden/embedded. (SSC Steno. 2014)

Question Figure



Answer Figure



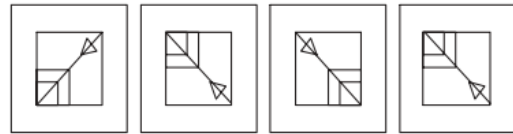
(a) (b) (c) (d)

48. Which answer figure will complete the pattern in the question figure? (SSC Steno. 2014)

Question Figure



Answer Figure

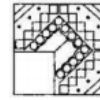


(a) (b) (c) (d)

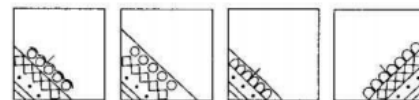
DIRECTIONS (Qs. 49-50) : In questions below, which answer figure will complete the pattern in the question figure ?

(SSC Sub. Ins. 2015)

49. Question Figure :

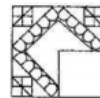


Answer Figures :

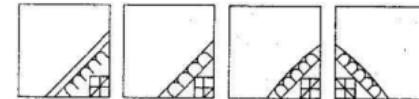


(a) (b) (c) (d)

50. Question Figure :



Answer Figures :

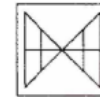


(a) (b) (c) (d)

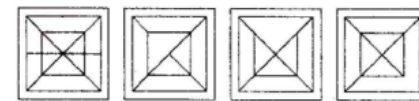
51. From the given answer figures, select the one in which the question figure is hidden/embedded.

Question Figure :

(SSC Sub. Ins. 2015)



Answer Figures:



(a) (b) (c) (d)

52. Which answer figure will complete the question figure? (SSC CHSL 2014)

Question Figure :

(SSC CHSL 2014)



Answer Figures :



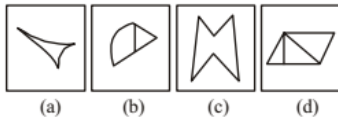
(a) (b) (c) (d)

53. Which of the answer figures is embedded in the question figure? (SSC CHSL 2014)

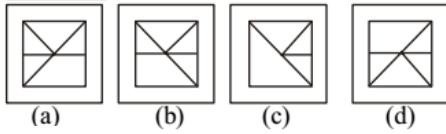
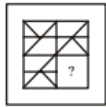
Question Figure :



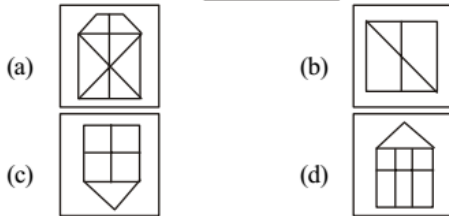
Answer figures :



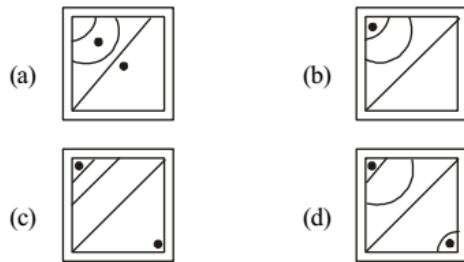
54. Which answer figure will complete the pattern in the question figure? (SSC CHSL 2015)



55. From the given answer figures, select the one in which the question figure is hidden/ embedded. (SSC CHSL 2015)



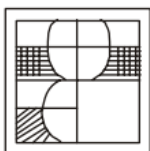
56. Which answer figure will complete the pattern in the question figure? (SSC CHSL 2015)



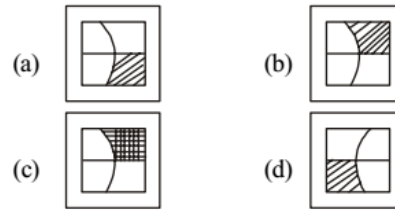
DIRECTIONS (Qs. 57-58): In the following Two Questions, which answer figure will complete the pattern in the question figure ?

(SSC CGL 1st Sit. 2015)

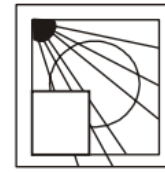
57. Question Figure



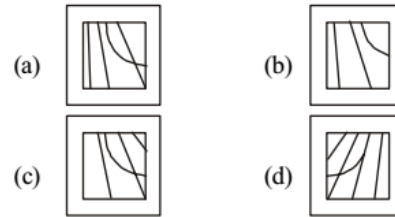
Answer Figures :



58. Question Figure

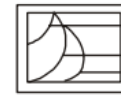


Answer Figures :



59. From the given answer figures, select the one which is hidden/ embedded in the question figure:

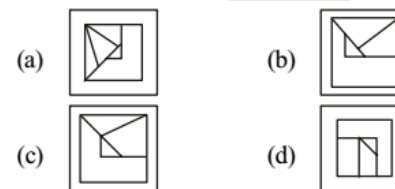
Question Figure :



Answer Figures :



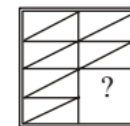
60. From the given answer figures, select the one in which the question figure is hidden/ embedded. (SSC CGL 1st Sit. 2015)

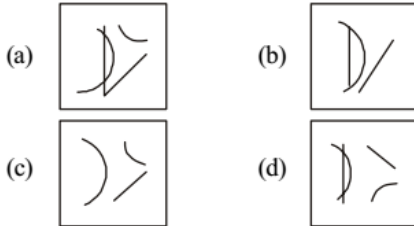
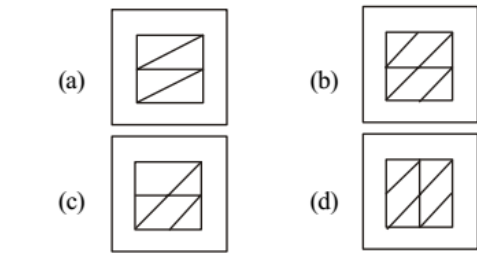


DIRECTIONS (Qs. 61-62): Which answer figure will complete the pattern in the question figure ?

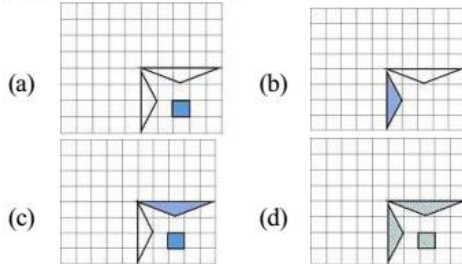
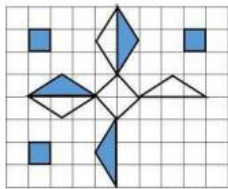
(SSC CGL 1st Sit. 2015)

61.

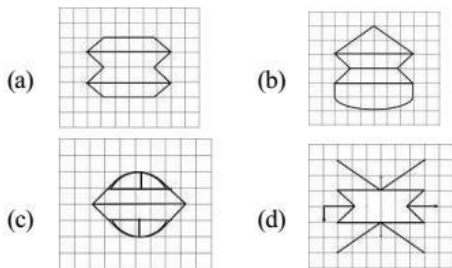
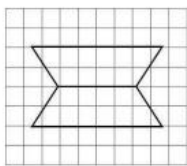




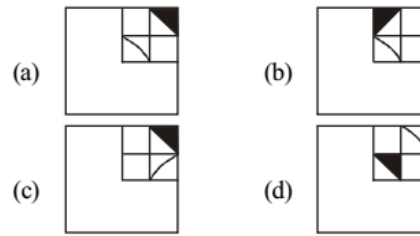
63. Which answer figure will complete the pattern in the question figure? (SSC CGL 1st Sit. 2016)



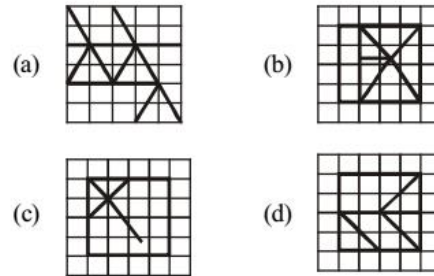
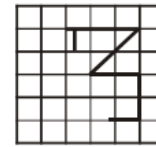
64. Select the one in which the question figure is hidden/embedded. (SSC CGL 1st Sit. 2016)



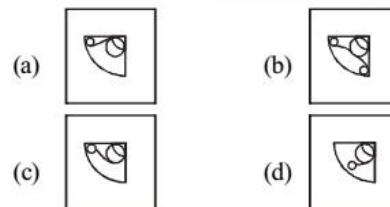
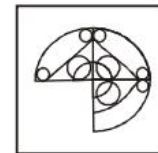
65. Which answer figure will complete the pattern in the question figure? (SSC CGL 1st Sit. 2016)



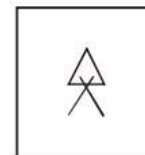
66. From the given answer figures, select the one in which the question figure is hidden/embedded. (SSC CGL 1st Sit. 2016)

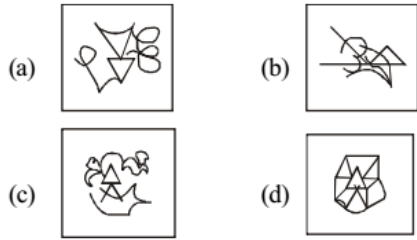


67. Which answer figure will complete the pattern in the question figure? (SSC CGL 1st Sit. 2016)

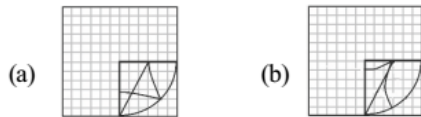
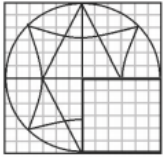


68. From the given answer figures, select the one in which the question figure is hidden/embedded (SSC CGL 1st Sit. 2016)

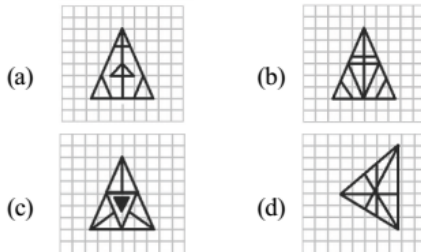
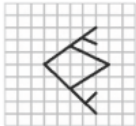




69. Which answer figure complete the pattern in the question figure? (SSC CGL 1st Sit. 2016)



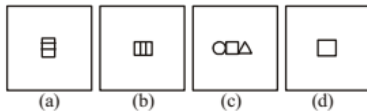
70. From the given figure, select the one in the question the figure is hidden / embedded (SSC CGL 1st Sit. 2016)



71. Choose the correct figure to complete the matrix : Question Figure : (SSC Stenographer 2016)



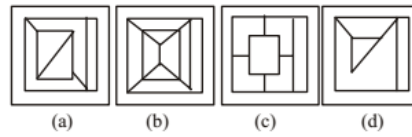
Answer Figures:



72. From the given answer figures, select the one in which the question figure is hidden/embedded. (SSC Stenographer 2016)



Answer Figures:



DIRECTIONS : In the following questions, which answer figure will complete the pattern in the question figure. (SSC Sub. Ins. 2016)

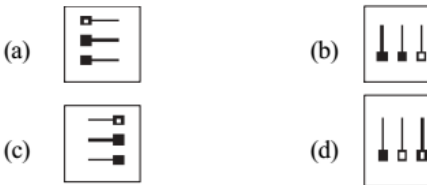
73. Question Figure:



Answer Figure:



74. Question Figure:

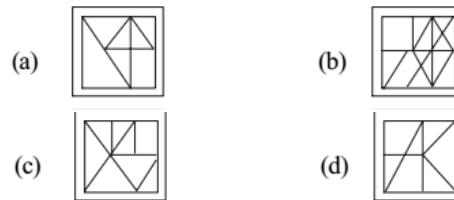


DIRECTIONS : In the following questions, From the given answer figures, select the one in which the question figure is hidden/embedded. (SSC Sub. Ins. 2016)

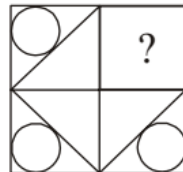
75. Question Figure

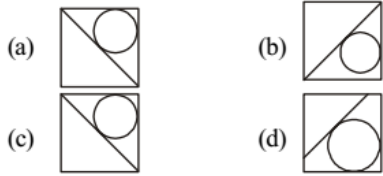


Answer Figures

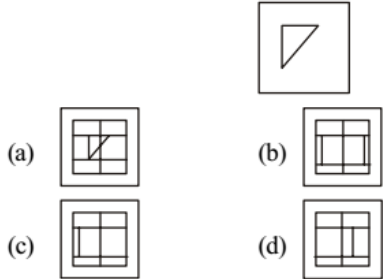


76. Which answer figure will complete the pattern in the question figure? (SSC CGL. 2017)

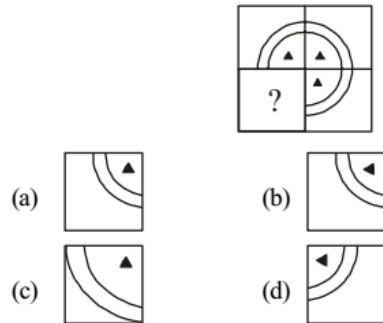




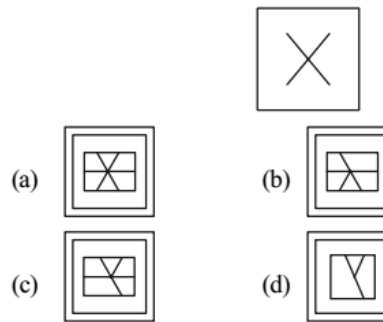
77. From the given answer figures, select the one in which the question figure is hidden/embedded. (SSC CGL. 2017)



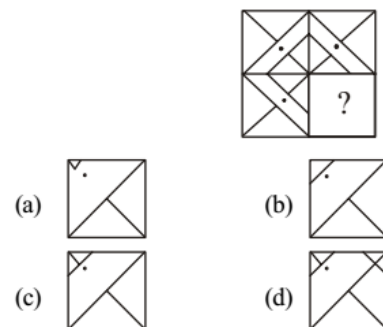
78. Which answer figure will complete the pattern in the question figure? (SSC CGL. 2017)



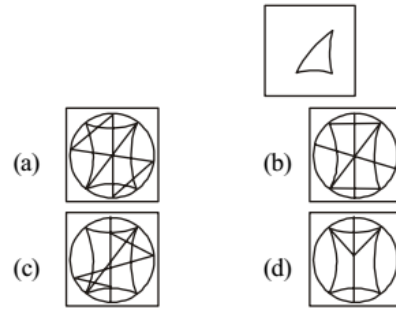
79. From the given answer figures, select the one in which the question figure is hidden/embedded. (SSC CGL. 2017)



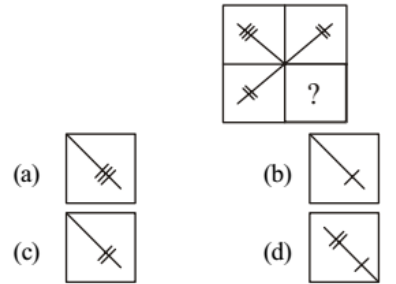
80. Which answer figure will complete the pattern in the question figure? (SSC CGL. 2017)



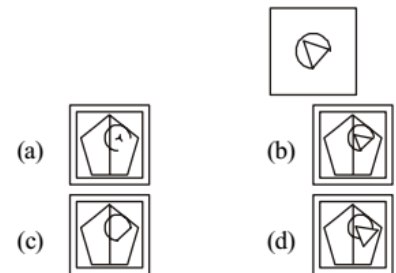
81. From the given answer figures, select the one in which the question figure is hidden/embedded. (SSC CGL. 2017)



82. Which answer figure will come the pattern in the question figure? (SSC CGL. 2017)

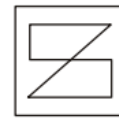


83. From given answer figures, select the one in which question figure is hidden/embedded. (SSC CGL. 2017)

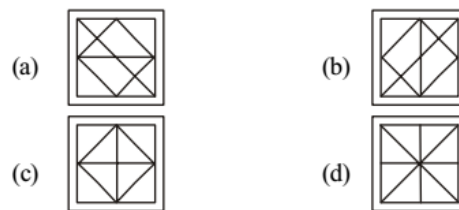


84. From the given answer figures, select the one in which the question figure is hidden/embedded. (SSC MTS 2017)

Question Figure

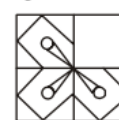


Answer Figures

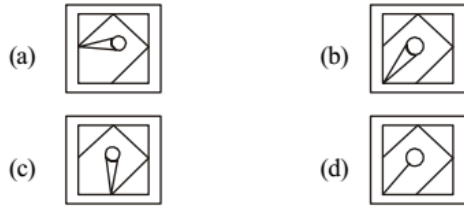


85. Which answer figure will complete the pattern in the question figure? (SSC MTS 2017)

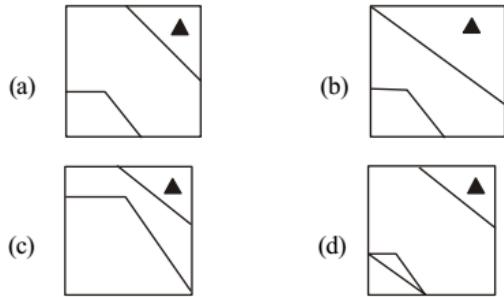
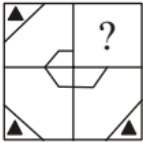
Question Figure



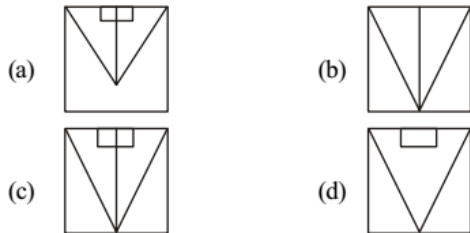
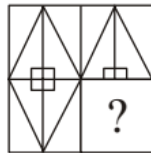
Answer Figures



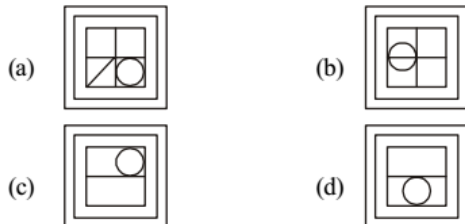
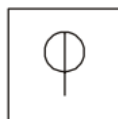
86. Which answer figure will complete the pattern in the question figure? (SSC Sub. ins 2017)



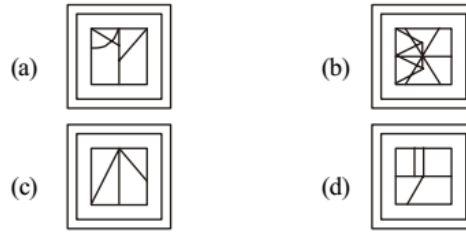
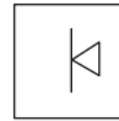
87. Which answer figure will complete the pattern in the question figure? (SSC Sub. ins 2017)



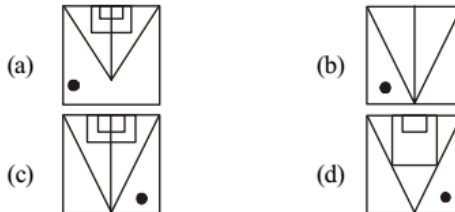
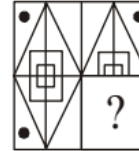
88. From the given answer figures, select the one in which the question figure is hidden/embedded. (SSC Sub. ins 2017)



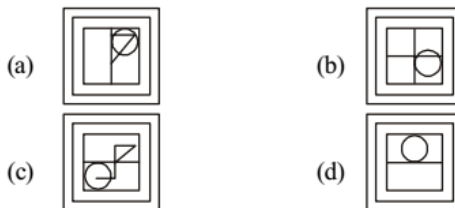
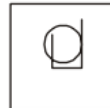
89. From the given answer figures, select the one in which the question figure is hidden/embedded. (SSC Sub. ins 2017)



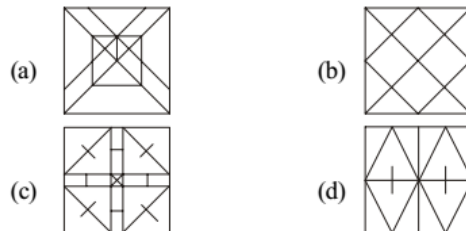
90. Which answer figure will complete the pattern in the question figure? (SSC Stenographer 2017)



91. From the given answer figures, select the one in which the question figure is hidden/embedded. (SSC Stenographer 2017)



92. Select the figure in which the given figure is embedded. (SSC CGL 2018)



93. Select the figure in which the given figure is embedded. (Rotation is not allowed) (SSC CGL 2018)



- (a) (b) (c) (d)

94. Select the option in which the given figure (X) is embedded (rotation not allowed). (SSC CHSL 2018)



- (a) (b) (c) (d)

95. Select the option in which the given figure is embedded. (Rotation is not allowed) (SSC Sub. Ins. 2018)



- (a) (b) (c) (d)

96. Select the option in which the given figure is embedded. (SSC Sub. Ins. 2018)



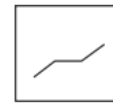
- (a) (b) (c) (d)

97. Choose the option figure in which the problem figure is hidden embedded. (SSC Stenographer 2018)



- (a) (b) (c) (d)

98. Select the option figure in which the given figure is embedded (rotation is NOT allowed). (SSC CGL 2019-20)



- (a) (b) (c) (d)

99. Select the option in which given figure is embedded. (Rotation is not allowed) (SSC MTS 2019-20)



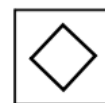
- (a) (b) (c) (d)

100. Study the given pattern carefully and select the figure that will complete the pattern given in the question figure. (SSC MTS 2019-20)



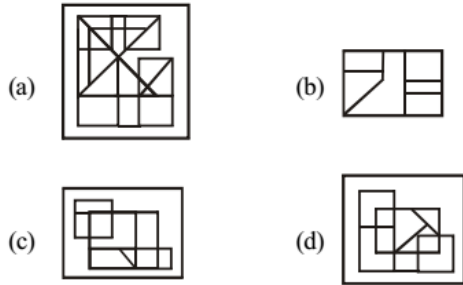
- (a) (b) (c) (d)

101. Select the option in which the given figure is embedded. (Rotation is not allowed) (SSC CHSL 2019-20)



- (a) (b) (c) (d)

102. Select the option in which the given figure is embedded (rotation is NOT allowed). (SSC CGL 2020-21)



103. Select the option figure which contains figure X embedded in it as its part (rotation is NOT allowed). (SSC CHSL 2020-21)

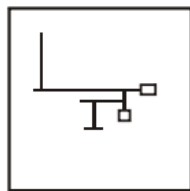
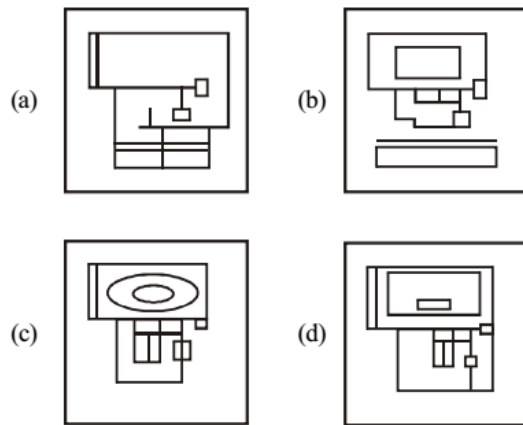
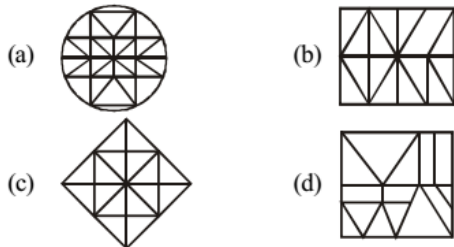


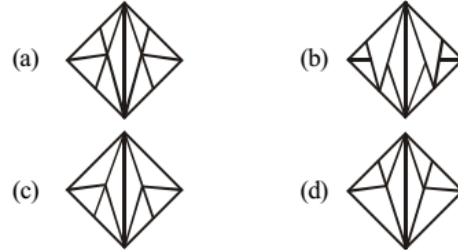
Figure X



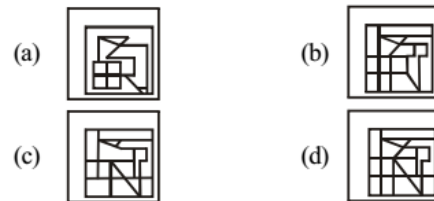
104. Select the option in which the given figure is embedded (rotation is NOT allowed). (SSC MTS 2020-21)



105. Select the option figure, which when placed in the blank space of the figure would complete the pattern. (SSC MTS 2020-21)



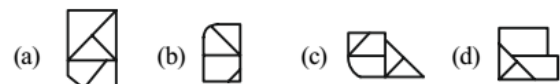
106. Select the option figure in which the given figure is embedded rotation is NOT allowed. (SSC Stenographer 2020-21)



107. Select the option figure which is NOT embedded in the figure (X) given below (rotation is NOT allowed). (SSC Sub-Inspector 2020-21)



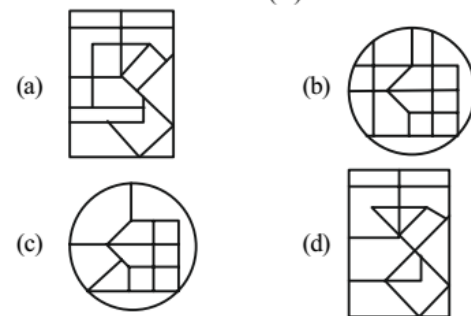
(X)






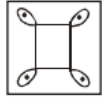


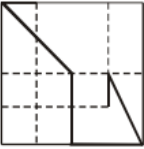



108. Select the option in which the given figure (X) is embedded (rotation is NOT allowed). (SSC Sub-Inspector 2020-21)

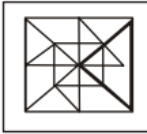

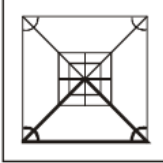
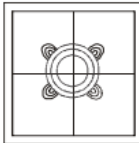


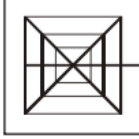


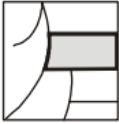


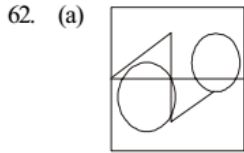
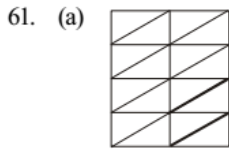
(X)



Hints & Solutions

1. (d) 
2. (a) 
3. (c)
4. (c) 
5. (b) 6. (d)
7. (d) Option (d) will complete the question figure.
8. (b) Option (b) is the hidden/ embedded figure.
9. (c) 10. (c)
11. (d) 
12. (b) 
13. (a) 14. (b)
15. (b) 
16. (b) Option (b) is complete the questions figure completely.
17. (d) 
18. (a) 19. (c) 20. (a) 21. (d) 22. (d)
23. (b)
24. (b) 
25. (c) 26. (c) 27. (c)
28. (b) 
29. (c) 

30. (c) 
31. (d) 
32. (d) 
33. (d)
34. (c) 
35. (b) 
36. (c) 
37. (a) 38. (c) 39. (b) 40. (d) 41. (b)
42. (d) 43. (b) 44. (d) 45. (a) 46. (b)
47. (a) 48. (b) 49. (a) 50. (c)
51. (a) 
52. (a) 53. (c) 54. (d)
55. (a) The figure  is embedded in 
56. (b) Dot is only in first circle so figure (b) will complete the picture in the question figure.
57. (a) 58. (c)
59. (b) 
60. (b)



63. (c) 64. (b) 65. (a) 66. (b) 67. (b)

68. (d) 69. (a) 70. (b) 71. (b) 72. (b)

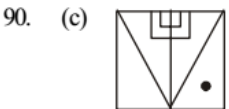
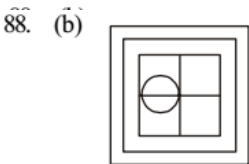
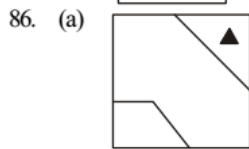
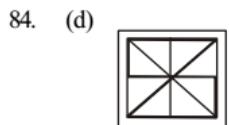
73. (a) Option (a) is correct

74. (d) Option (d) is correct

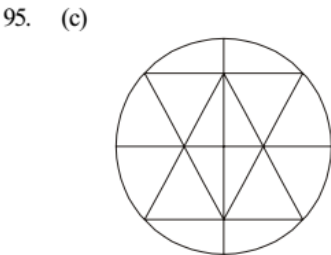
75. (b) Option (b) is correct

76. (a) 77. (a) 78. (a) 79. (a) 80. (c)

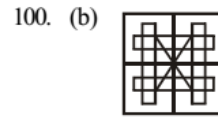
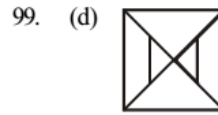
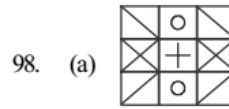
81. (a) 82. (a) 83. (b)



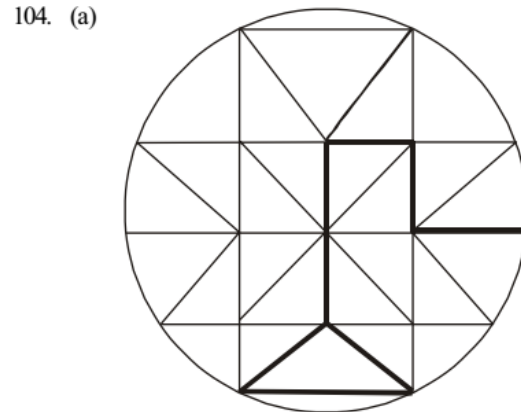
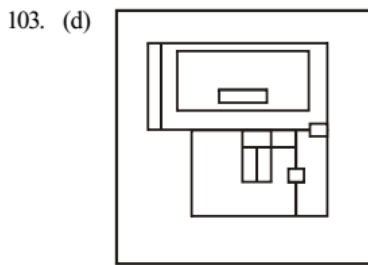
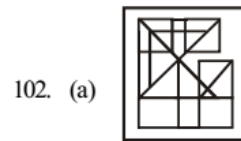
92. (a) 93. (d) 94. (a)



96. (c) 97. (a)



101. (c) In option (c) given figure is embedded.



105. (c) Figure in option (c) would complete the pattern of the question figure.

106. (d) figure is embedded in answer figure (d).

107. (a) Option (a) is not embedded in the figure (X).

108. (d) Given question figure is embedded in answer figure (d).