

Multi Tasking Non Technical Staff Havaladar CBIC and CBN Examination 2021

Roll Number	
Candidate Name	
Venue Name	TCS Gito Bitan
Exam Date	06/07/2022
Exam Time	5:00 PM - 6:30 PM
Subject	MTS Non technical and Havaladar Examination 2021

Section : General English

Q.1 Select the most appropriate option to fill in the blank.

He said the cooperative will continue to invest _____ per its usual yearly rate.

- Ans
- 1. that
 - 2. so
 - 3. such
 - 4. as

Question ID : 26433051031
Status : Answered
Chosen Option : 4

Q.2 Select the option that will improve the underlined part of the given sentence. In case no improvement is needed, select 'No improvement required'.

In his memoir, Attenborough said that, "Lisa would have been 11 if she was with us today."

- Ans
- 1. Attenborough said that, "Lisa will have been 11 if she were
 - 2. Attenborough said, "Lisa would have been 11 if she were
 - 3. Attenborough said, "Lisa would have been 11 if she was
 - 4. No improvement required

Question ID : 26433051568
Status : Answered
Chosen Option : 2

Q.3 The following sentence has been divided into parts. One of them may contain an error. Select the part that contains the error from the given options. If you don't find any error, mark 'No error' as your answer.

Young scientists have fresh ideas; they are ambitious and highly productive.

- Ans
- 1. and highly productive
 - 2. Young scientists have fresh ideas
 - 3. No error
 - 4. they are ambitious

Question ID : 26433050742
Status : Marked For Review
Chosen Option : 3

Q.4 Select the option that corrects the misspelt words in the given sentence.

The anti-terrorist squad is investigatng this case.

- Ans
- 1. The anti-terrorist squad is investigatng this case.
 - 2. The anti-terrorist squad is invstigating this case.
 - 3. The anti-terroist squad is investegating this case.
 - 4. The anti-terrorist squad is investigating this case.

Question ID : 26433050764
Status : Answered
Chosen Option : 4

Q.5 Select the most appropriate option to fill in the blank.

If I _____ a doctor, I would have treated you all.

- Ans
- 1. were
 - 2. would
 - 3. am
 - 4. could

Question ID : 26433050900
Status : Answered
Chosen Option : 1

Q.6 Select the most appropriate ANTONYM of the underlined word.

He carries that sorrow with him now, just under the surface, almost tangible.

- Ans
- 1. Detectable
 - 2. Abstract
 - 3. Actual
 - 4. Distinct

Question ID : 26433051662
Status : Answered
Chosen Option : 2

Q.7 Select the option that will improve the underlined part of the given sentence. In case no improvement is needed, select 'No improvement required'.

These days, judging someone is easier then respecting them.

- Ans
- 1. is easier than
 - 2. is easiest than
 - 3. is more easier then
 - 4. No improvement required

Question ID : 26433050615
Status : Answered
Chosen Option : 1

Q.8 Select the correctly spelt word.

Ans 1. Assembly

2. Asembly

3. Asemmbly

4. Assemmbly

Question ID : 26433050841

Status : Answered

Chosen Option : 1

Q.9 Select the most appropriate meaning of the given idiom.

To lead one by the nose

Ans 1. To try again after failing at something

2. To control someone completely

3. To have the freedom to choose

4. To be anxious to start something

Question ID : 26433051281

Status : Answered

Chosen Option : 2

Q.10 Select the most appropriate ANTONYM of the given word.

Decay

Ans 1. Disintegrate

2. Growth

3. Spoilage

4. Breakdown

Question ID : 26433050833

Status : Answered

Chosen Option : 2

Q.11 Select the option that will improve the underlined part of the given sentence. In case no improvement is needed, select 'No improvement required'.

Why should we give up everything?

Ans 1. gives up

2. given off

3. gave at

4. No improvement required

Question ID : 26433050562

Status : Answered

Chosen Option : 4

Q.12 Select the most appropriate **ANTONYM** of the underlined word in the given sentence.

He learned to endure hunger and cold.

- Ans
- 1. Reconcile
 - 2. Persist
 - 3. Resist
 - 4. Sustain

Question ID : 26433050617
Status : Answered
Chosen Option : 3

Q.13 Select the option that will improve the underlined part of the given sentence. In case no improvement is needed, select 'No improvement required'.

My company beliefs that no one should turn up late for work.

- Ans
- 1. believing
 - 2. believes
 - 3. No improvement required
 - 4. belief

Question ID : 26433051422
Status : Answered
Chosen Option : 2

Q.14 Select the option that will improve the underlined part of the given sentence. In case no improvement is needed, select 'No improvement required'.

I am sorry of which my mother said.

- Ans
- 1. for what
 - 2. for which
 - 3. off that
 - 4. No improvement required

Question ID : 26433050882
Status : Answered
Chosen Option : 1

Q.15 Select the most appropriate meaning of the given idiom.

Play with fire

- Ans
- 1. To play a game honestly
 - 2. To do something risky
 - 3. To please someone
 - 4. To waste time on worthless things

Question ID : 26433050967
Status : Answered
Chosen Option : 2

Q.16 Select the most appropriate synonym of the given word.

Obstruct

- Ans 1. Replace
 2. Curb
 3. Release
 4. Unclog

Question ID : 26433050757
Status : Answered
Chosen Option : 2

Q.17 The following sentence has been divided into parts. One of them may contain an error. Select the part that contains the error from the given options. If you don't find any error, mark 'No error' as your answer.

Safety measures makes risky activities less risky.

- Ans 1. risky activities
 2. No error
 3. Safety measures makes
 4. less risky

Question ID : 26433050741
Status : Answered
Chosen Option : 3

Q.18 Select the most appropriate option to fill in the blank.

The ocean waves swelled and reached _____ her head, and she started screaming.

- Ans 1. among
 2. upon
 3. above
 4. at

Question ID : 26433051371
Status : Answered
Chosen Option : 3

Q.19 The following sentence has been split into four segments. Identify the segment that contains a grammatical error.

Human being are / the producers and the / consumers of Earth's / resources.

- Ans 1. Human being are
 2. resources
 3. the producers and the
 4. consumers of Earth's

Question ID : 26433051418
Status : Answered
Chosen Option : 1

Q.20 Select the most appropriate synonym of the underlined word.

I don't know why she wears these eccentric outfits.

- Ans 1. Expensive
 2. Elegant
 3. Bizarre
 4. Lavish

Question ID : 26433050914
Status : Answered
Chosen Option : 3

Comprehension:

In the following passage, some words have been deleted. Read the passage carefully and select the most appropriate option to fill in each blank.

Strong mental health is not just the (1) _____ of mental health problems. (2) _____ mentally or emotionally healthy is (3) _____ more than being free of depression, anxiety or other psychological issues. (4) _____ than the absence of mental illness, mental health (5) _____ to the presence of positive characteristics and positive outlook towards life.

SubQuestion No : 21

Q.21 Select the most appropriate option to fill in blank number 1.

- Ans 1. adequacy
 2. absence
 3. attendance
 4. leave

Question ID : 26433050903
Status : Answered
Chosen Option : 2

Comprehension:

In the following passage, some words have been deleted. Read the passage carefully and select the most appropriate option to fill in each blank.

Strong mental health is not just the (1) _____ of mental health problems. (2) _____ mentally or emotionally healthy is (3) _____ more than being free of depression, anxiety or other psychological issues. (4) _____ than the absence of mental illness, mental health (5) _____ to the presence of positive characteristics and positive outlook towards life.

SubQuestion No : 22

Q.22 Select the most appropriate option to fill in blank number 2.

- Ans 1. Being
 2. Been
 3. As
 4. Be

Question ID : 26433050904
Status : Answered
Chosen Option : 1

Comprehension:

In the following passage, some words have been deleted. Read the passage carefully and select the most appropriate option to fill in each blank.

Strong mental health is not just the (1) _____ of mental health problems. (2) _____ mentally or emotionally healthy is (3) _____ more than being free of depression, anxiety or other psychological issues. (4) _____ than the absence of mental illness, mental health (5) _____ to the presence of positive characteristics and positive outlook towards life.

SubQuestion No : 23

Q.23 Select the most appropriate option to fill in blank number 3.

Ans 1. many

2. very

3. much

4. most

Question ID : 26433050905

Status : Answered

Chosen Option : 3

Comprehension:

In the following passage, some words have been deleted. Read the passage carefully and select the most appropriate option to fill in each blank.

Strong mental health is not just the (1) _____ of mental health problems. (2) _____ mentally or emotionally healthy is (3) _____ more than being free of depression, anxiety or other psychological issues. (4) _____ than the absence of mental illness, mental health (5) _____ to the presence of positive characteristics and positive outlook towards life.

SubQuestion No : 24

Q.24 Select the most appropriate option to fill in blank number 4.

Ans 1. Sooner

2. Neither

3. Rather

4. Whether

Question ID : 26433050906

Status : Answered

Chosen Option : 3

Comprehension:

In the following passage, some words have been deleted. Read the passage carefully and select the most appropriate option to fill in each blank.

Strong mental health is not just the (1) _____ of mental health problems. (2) _____ mentally or emotionally healthy is (3) _____ more than being free of depression, anxiety or other psychological issues. (4) _____ than the absence of mental illness, mental health (5) _____ to the presence of positive characteristics and positive outlook towards life.

SubQuestion No : 25

Q.25 Select the most appropriate option to fill in blank number 5.

- Ans 1. names
 2. means
 3. resembles
 4. refers

Question ID : 26433050907
Status : Answered
Chosen Option : 4

Section : **General Intelligence and Reasoning**

Q.1 Select the option that is related to the fifth number in the same way as the second number is related to the first number and fourth number is related to third number.

(NOTE: Operations should be performed on the whole numbers, without breaking down the numbers into its constituent digits. E.g.13 – Operations on 13 such as adding /deleting /multiplying etc. to 13 can be performed. Breaking down 13 into 1 and 3 and then performing mathematical operations on 1 and 3 is not allowed)

139 : 228 :: 122 : 211 :: 2 : ?

- Ans 1. 91
 2. 198
 3. 89
 4. 189

Question ID : 26433048208
Status : Answered
Chosen Option : 1

Q.2 Which two numbers need to be interchanged to make the following equation correct?

$$42 \times 15 \div 3 + 6 - 5 = 94$$

- Ans 1. 15 and 5
 2. 15 and 6
 3. 5 and 3
 4. 6 and 3

Question ID : 26433048136
Status : Answered
Chosen Option : 2

Q.3 Read the given statements and conclusions carefully. Assuming that the information given in the statements is true, even if it appears to be at variance with commonly known facts, decide which of the given conclusions logically follow(s) from the statements.

Statements:

All trousers are pants.

All pants are clothes.

Conclusions:

I. Some clothes are trousers.

II. All pants are trousers.

- Ans**
- 1. Both conclusions I and II follow.
 - 2. Only conclusion I follows.
 - 3. Neither conclusion I nor II follow.
 - 4. Only conclusion II follows.

Question ID : 26433048279

Status : Answered

Chosen Option : 2

Q.4 Select the option that is related to the fifth number in the same way as the second number is related to the first number and the fourth number is related to the third number.

24 : 36 :: 38 : 57 :: 58 : ?


- Ans**
- 1. 79
 - 2. 69
 - 3. 75
 - 4. 87

Question ID : 26433048132

Status : Answered

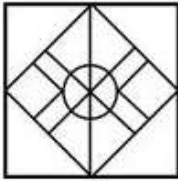
Chosen Option : 4

Q.5 Select the option in which the given figure is embedded as its part (rotation is NOT allowed).

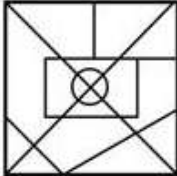


Ans

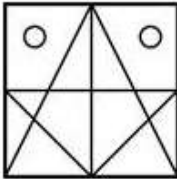
✓ 1.



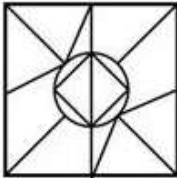
✗ 2.



✗ 3.



✗ 4.



Question ID : 26433048289

Status : Answered

Chosen Option : 1

Q.6 Read the given statements and conclusions carefully. Assuming that the information given in the statements is true, even if it appears to be at variance with commonly known facts, decide which of the given conclusions logically follow(s) from the statements.

Statements:

No shirt is a pant. Some shirts are jackets.

All jackets are trousers.

Conclusions:

I) Some shirts are trousers is a possibility.

II) No pant is a jacket.

Ans ✗ 1. Neither conclusion I nor II follows

✗ 2. Only conclusion II follows

✓ 3. Only conclusion I follows

✗ 4. Both conclusions I and II follow.

Question ID : 26433048205

Status : Answered

Chosen Option : 1

Q.7 In a certain code language, 'Trucks are heavy and good' is coded as '6 8 7 2 @', 'Weight lifts human heavy' is coded as '# % 4 8', and 'good are multiples' is coded as '@ pr 6'. What is can be the code for 'heavy good' in that language?

- Ans 1. 7 8
 2. 8 6
 3. 6 @
 4. 4 6

Question ID : 26433048647
Status : Answered
Chosen Option : 2

Q.8 Select the option that is related to the fifth word in the same way as the second word is related to the first word and the fourth word is related to the third word.

Retina : Eye :: Pons : Brain :: Cochlea : ?

- Ans 1. Heart
 2. Ear
 3. Throat
 4. Nose

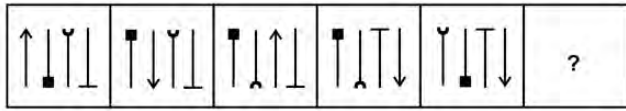
Question ID : 26433048195
Status : Answered
Chosen Option : 2

Q.9 In a certain code language, 'Numbers are even' is coded as '5 3 +', and 'Odd factors are multiples' is coded as '+ 7 6 @'. What can be the code for 'even' in that code language?

- Ans 1. 6
 2. +
 3. 5 or 3
 4. 7

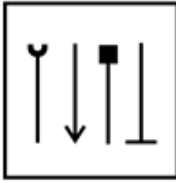
Question ID : 26433048720
Status : Answered
Chosen Option : 3

Q.10 Select the figure from among the given options that can replace the question mark (?) in the following series.



Ans

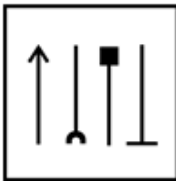
1.



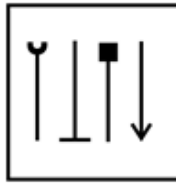
2.



3.

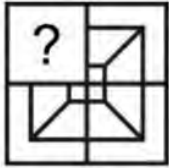


4.



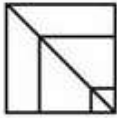
Question ID : 26433048138
Status : **Marked For Review**
Chosen Option : 4

Q.11 Select the figure from the options that can replace the question mark (?) and complete the pattern.

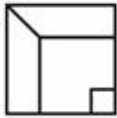


Ans

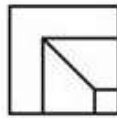
1.



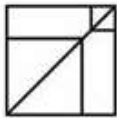
2.



3.



4.



Question ID : 26433048613

Status : Answered

Chosen Option : 3

Q.12 Select the option that is related to the fifth word in the same way as the second word is related to the first word and the fourth word is related to the third word.

Book : Author :: Movie : Director :: Poem : ?

Ans 1. Poet

2. Singer

3. Actor

4. Dancer

Question ID : 26433047994

Status : Answered

Chosen Option : 1

Q.13 Select the figure from the given options that can replace the question mark (?) and complete the pattern.



Ans

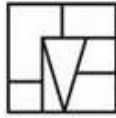
1.



2.



3.



4.

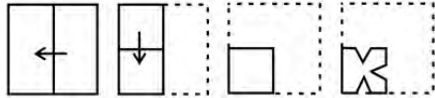


Question ID : 26433048813

Status : Answered

Chosen Option : 3

Q.14 The sequence of folding a piece of paper and the manner in which the folded paper has been cut is shown in the following figures. How would this paper look when unfolded?



Ans

- 1.
- 2.
- 3.
- 4.

Question ID : 26433047966
 Status : Answered
 Chosen Option : 2

Q.15 In a certain code language, if dress is called comb, comb is called hair dryer, hair dryer is called lipstick, lipstick is called sandal, and sandal is called jewellery, then what is used to colour the lips?

- Ans
- 1. Jewellery
 - 2. Comb
 - 3. Hair dryer
 - 4. Sandal

Question ID : 26433048024
 Status : Answered
 Chosen Option : 4

Q.16 The heights of seven boys B1, B2, B3, B4, B5, B6 and B7 is compared. They all have different heights. B2 is taller than B1 and B6. B7 is shorter than B3 and B4 but taller than B5. B5 is taller than only three boys and B3 is the tallest. How many boys are shorter than B4 and taller than B2?

Ans 1. 2

2. 1

3. 4

4. 3

Question ID : 26433048807

Status : Answered

Chosen Option : 1

Q.17 Seven friends, Parv, Qazi, Raees, Sushil, Tania, Uma, and Vishnu are sitting around a circular table facing the centre. Parv is immediate neighbour of both Tania and Sushil. Uma is immediate neighbour of both Qazi and Vishnu. Qazi is sitting second to the right of Tania. Who is sitting to the immediate left of Qazi?

Ans 1. Raees

2. Sushil

3. Vishnu

4. Uma

Question ID : 26433048126

Status : Answered

Chosen Option : 1

Q.18 In a certain code language, 'TRAM' is written as 'UQBL' and 'PAST' is written as 'QZTS'. How will 'DEED' be written in that language?

Ans 1. FEDC

2. EFGD

3. CEFD

4. EDFC

Question ID : 26433047997

Status : Answered

Chosen Option : 4

Q.19 What will be the value of the given expression, if 'A' means '+', 'B' means '-', 'C' means 'x' and 'D' means '÷'?

20 B 30 A 15 C 20 D 5

Ans 1. 60

2. 50

3. 40

4. 55

Question ID : 26433048789

Status : Answered

Chosen Option : 2

Q.20 Select the set in which the numbers are related in the same way as are the numbers of the following sets.

(NOTE : Operations should be performed on the whole numbers, without breaking down the numbers into its constituent digits. E.g. 13 – Operations on 13 such as adding /deleting /multiplying etc. to 13 can be performed. Breaking down 13 into 1 and 3 and then performing mathematical operations on 1 and 3 is not allowed.)

(13, 28, 86) (18, 38, 116)

Ans 1. (10, 22, 68)

2. (9, 18, 56)

3. (8, 18, 54)

4. (11, 24, 76)

Question ID : 26433048284

Status : Answered

Chosen Option : 1

Q.21 Select the option that is related to the third letter-cluster in the same way as the second letter-cluster is related to the first letter-cluster.

POLE : SROH :: HAIR : ?

Ans 1. KGLU

2. KDLU

3. KELU

4. KDLV

Question ID : 26433048724

Status : Answered

Chosen Option : 2

Q.22 Seven women A, B, C, D, E, F and G are sitting in a row facing the South (not necessarily in the same order). A is fifth to the right of G. A is at one of the ends. E is exactly in the middle of row. F is fourth to the right of G. B is not the immediate neighbour of E. D is to the immediate left of E.

Which of the following statements is/are NOT correct?

I. D is third to the left of F.

II. F is sitting between C and D.

Ans 1. Both I and II

2. Only I

3. Neither I nor II

4. Only II

Question ID : 26433048806

Status : Answered

Chosen Option : 4

Q.23 Identify the number that does NOT belong to the following series.

46, 93, 188, 379, 764, 1529

Ans 1. 764

2. 93

3. 188

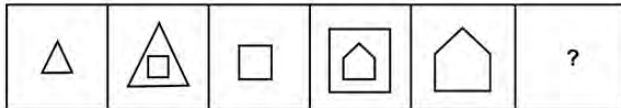
4. 379

Question ID : 26433048794

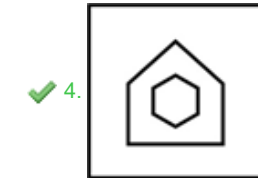
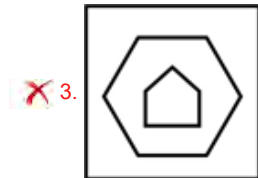
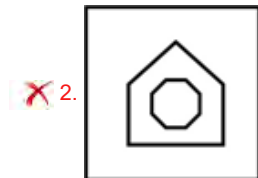
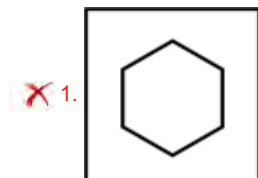
Status : Answered

Chosen Option : 1

Q.24 Select the figure from among the given options that can replace the question mark (?) in the following series.



Ans



Question ID : 26433048212

Status : Answered

Chosen Option : 4

Q.25 Select the letter from among the given options that can replace the question mark (?) in the following series.

I, M, Q, U, ?, C

- Ans
- 1. W
 - 2. A
 - 3. V
 - 4. Y

Question ID : 26433048118
Status : Answered
Chosen Option : 4

Section : Numerical Aptitude

Q.1 What approximate value should come in the place of the question mark '?' in the following equation?

$$305.03 \div 61.09 \times 11.47 = ?$$

- Ans
- 1. 57
 - 2. 47
 - 3. 12
 - 4. 63

Question ID : 26433049544
Status : Answered
Chosen Option : 1

Q.2 The average weight of 6 girls is increased by 2.5 kg when one of the girls whose weight is 38 kg is replaced by a new girl. Find the weight of the new girl.

- Ans
- 1. 58 kg
 - 2. 53 kg
 - 3. 49 kg
 - 4. 46 kg

Question ID : 26433049473
Status : Answered
Chosen Option : 2

Q.3 Find the area of a trapezium whose parallel sides are of length 15 cm and 20 cm, respectively, and whose distance between the parallel sides is 12 cm.

- Ans
- 1. 280 cm²
 - 2. 210 cm²
 - 3. 360 cm²
 - 4. 120 cm²

Question ID : 26433049565
Status : Answered
Chosen Option : 2

Q.4 What is the largest number that can exactly divide 403 and 496?

- Ans
- 1. 62
 - 2. 93
 - 3. 13
 - 4. 31

Question ID : 26433049637
Status : Answered
Chosen Option : 4

Q.5 Ravi sold a chair at a loss of 40%. The selling price of the chair is ₹900. What is the cost price of the chair?

- Ans
- 1. ₹1,260
 - 2. ₹1,500
 - 3. ₹1,800
 - 4. ₹1,660

Question ID : 26433049622
Status : Answered
Chosen Option : 2

Q.6 Two right circular cones of equal volumes have their heights in the ratio 4 : 9. What is the ratio of the radii of their bases, the cones coming in the same order as that in which the ratio of their heights is given?

- Ans
- 1. 3 : 2
 - 2. 9 : 4
 - 3. 2 : 3
 - 4. 4 : 9

Question ID : 26433049366
Status : Answered
Chosen Option : 1

Q.7 If 60% of $G = \frac{4}{5}$ of H, then G is approximately what percentage of H?

- Ans
- 1. 125%
 - 2. 115%
 - 3. 140%
 - 4. 133.33%

Question ID : 26433049975
Status : Answered
Chosen Option : 4

Q.8 The terms $x - 1$, $x + 2$, $3x + 5$, and y are in proportion. Find the value of y if $x = 5$.

- Ans**
- 1. 45
 - 2. 29
 - 3. 35
 - 4. 24

Question ID : 26433049480
Status : Answered
Chosen Option : 3

Q.9 Krish can do a piece of work in 4 days, while Rishi can do the same work in 6 days. Both of them work together and get a total of ₹1,600. What is the share of Rishi?

- Ans**
- 1. ₹800
 - 2. ₹640
 - 3. ₹720
 - 4. ₹580

Question ID : 26433049435
Status : Answered
Chosen Option : 2

Q.10 The average age of 24 students in a class is 15 years. When the teacher's age is included, the average increases by 1. What is the teacher's age (in years)?

- Ans**
- 1. 50
 - 2. 45
 - 3. 55
 - 4. 40

Question ID : 26433050296
Status : Answered
Chosen Option : 4

Q.11 Find the rate of simple interest per annum at which a sum of ₹1,200 will amount to ₹1,800 in 4 years.

- Ans**
- 1. 15%
 - 2. 12.5%
 - 3. 14%
 - 4. 10%

Question ID : 26433049481
Status : Answered
Chosen Option : 2

Q.12 The value of $\{(0.51)^3 + (0.49)^3\} \div \{(0.51)^2 - 0.2499 + (0.49)^2\}$ is:

- Ans
- 1. 2.9
 - 2. 1.00
 - 3. 1.57
 - 4. 3.31

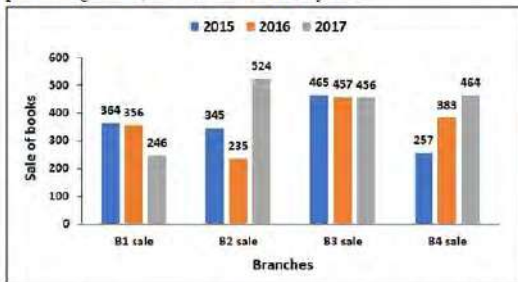
Question ID : 26433049468
Status : Answered
Chosen Option : 2

Q.13 The difference between the length and the breadth of a rectangle is 16 cm. If its perimeter is 188 cm, then what is its area?

- Ans
- 1. 2100 cm²
 - 2. 2145 cm²
 - 3. 2050 cm²
 - 4. 2375 cm²

Question ID : 26433050316
Status : Answered
Chosen Option : 2

Q.14 The following bar graph shows the number of books sold from four different branches, B1, B2, B3 and B4, of a publishing house, in three consecutive years.

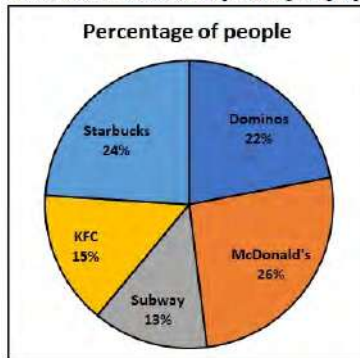


Calculate the total number of books sold from branch B3 during these three years.

- Ans
- 1. 1432
 - 2. 1378
 - 3. 1322
 - 4. 1783

Question ID : 26433049488
Status : Answered
Chosen Option : 2

Q.15 A survey was conducted among 3000 people to find the chain of cafes that was most popular. The following pie chart shows the distribution of the percentage of people according to the choice of their favourite cafe.



Find the ratio of the number of the people who selected the most popular among the given cafe chains as their favourite to the number of the people who selected the least popular among the given cafe chains as their favourite.

- Ans**
- 1. 2 : 1
 - 2. 1 : 3
 - 3. 1 : 2
 - 4. 3 : 1

Question ID : 26433049564
Status : Answered
Chosen Option : 1

Q.16 The average of U, V and W is 48 and that of V and W is 48. What is the value of U?

- Ans**
- 1. 44
 - 2. 48
 - 3. 42
 - 4. 46

Question ID : 26433049346
Status : Answered
Chosen Option : 2

Q.17 A car travels the first half of a journey at a speed of 80 km/h and the next half of the journey at 100 km/h. What is the average speed of the car? [Give your answer correct to 2 places of decimal.]

- Ans**
- 1. 88.89 km/h
 - 2. 92.29 km/h
 - 3. 82.28 km/h
 - 4. 45.41 km/h

Question ID : 26433049483
Status : Answered
Chosen Option : 1

Q.18 A can do a piece of work alone in 12 days. B is 20% more efficient than A, and C is 25% more efficient than B. In how many days can B and C together complete the work?

- Ans**
- 1. $\frac{35}{7}$ days
 - 2. $\frac{35}{9}$ days
 - 3. $\frac{40}{7}$ days
 - 4. $\frac{40}{9}$ days

Question ID : 26433049994
Status : Answered
Chosen Option : 4

Q.19 If $M = 8x$ and $N = 6x$, then N is what percentage less than M?

- Ans**
- 1. 22.5%
 - 2. 33.33%
 - 3. 25%
 - 4. 20%

Question ID : 26433049675
Status : Answered
Chosen Option : 3

Q.20 How much amount will be received on a principal of ₹10,000 at the rate of 12% per annum, compounded annually for 2 years?

- Ans**
- 1. ₹13,526
 - 2. ₹11,526
 - 3. ₹13,446
 - 4. ₹12,544

Question ID : 26433049633
Status : Answered
Chosen Option : 4

Q.21 The following table shows the total number of votes polled and the percentage of invalid votes in a polling center in a village during the last four Assembly elections.

Year	Total votes polled	Percentage of Invalid votes
2005	6500	5%
2010	8000	7%
2015	9400	15%
2020	10400	12%

What is the sum of the number of valid votes polled in 2010 and 2015 at this center?

- Ans**
- 1. 16140
 - 2. 15430
 - 3. 15600
 - 4. 16425

Question ID : 26433050137
Status : Answered
Chosen Option : 2

Q.22 The marked price of an article is kept at 25% above the cost price. If the article is sold at a discount of 8%, find the ratio of its selling price to its cost price.

- Ans**
- 1. 43 : 40
 - 2. 23 : 20
 - 3. 23 : 40
 - 4. 20 : 23

Question ID : 26433049478
Status : Answered
Chosen Option : 2

Q.23 In a housing society, the ratio of two-wheelers to four-wheelers is 11 : 9. Among the four-wheelers, one-fourth are petrol vehicles and the remaining 81 are diesel vehicles. How many two-wheelers are there in this housing society?

- Ans**
- 1. 88
 - 2. 132
 - 3. 121
 - 4. 99

Question ID : 26433050130
Status : Answered
Chosen Option : 2

Q.24 By selling an article for ₹450, Riyan incurred a loss of 10%. At what price should he sell it to make a profit of 12%?

- Ans
- 1. ₹480
 - 2. ₹440
 - 3. ₹560
 - 4. ₹600

Question ID : 26433049552
Status : Answered
Chosen Option : 3

Q.25 The speed of a boat in still water is 16 km/h. the time taken by the boat to cover a distance of 18 km upstream is equal to the time taken by the boat to travel 30Km downstream. What is the speed of the stream?

- Ans
- 1. 4 km/h
 - 2. 7 km/h
 - 3. 5 km/h
 - 4. 6 km/h

Question ID : 26433050134
Status : Answered
Chosen Option : 1

Section : General Awareness

Q.1 In which state of India is Nishagandhi festival celebrated?

- Ans
- 1. Kerala
 - 2. Odisha
 - 3. Madhya Pradesh
 - 4. Rajasthan

Question ID : 26433047521
Status : Answered
Chosen Option : 4

Q.2 The famous song 'Aye Mere Watan Ke Logo' was originally sung by _____.

- Ans
- 1. Shreya Ghoshal
 - 2. Arijit Singh
 - 3. Lata Mangeshkar
 - 4. Asha Bhosle

Question ID : 26433046886
Status : Answered
Chosen Option : 3

Q.3 Who among the following took the title of 'Ghazi' after defeating Rana Sanga in the Battle of Khanwa in 1527?

- Ans 1. Babur
 2. Daulat Khan Lodhi
 3. Humayun
 4. Mahmud Shah I

Question ID : 26433047032
Status : Answered
Chosen Option : 1

Q.4 Mona writes about an ocean that separates North America from Europe. Which ocean is it?

- Ans 1. Atlantic Ocean
 2. Arctic Ocean
 3. Indian Ocean
 4. Pacific Ocean

Question ID : 26433047026
Status : Answered
Chosen Option : 1

Q.5 What is the term of State Legislative Assembly in India as per Indian Constitution?

- Ans 1. 7 years
 2. 4 years
 3. 5 years
 4. 3 years

Question ID : 26433046964
Status : Answered
Chosen Option : 3

Q.6 With which Indian state is the 'Panthi' dance form associated?

- Ans 1. Maharashtra
 2. Chhattisgarh
 3. Punjab
 4. Kerala

Question ID : 26433046870
Status : Answered
Chosen Option : 3

Q.7 Which Mauryan ruler was called 'Amitrochates' by the Greeks?

- Ans 1. Samudragupta
 2. Chandragupta I
 3. Bindusara
 4. Kanishka

Question ID : 26433046881
Status : Answered
Chosen Option : 3

Q.8 Which of the following Articles under Directive Principles of State Policy, in the Indian constitution provides the organisation of village panchayats?

- Ans 1. Article 60
 2. Article 50
 3. Article 30
 4. Article 40

Question ID : 26433047038
Status : Answered
Chosen Option : 4

Q.9 According to the data from the economic think-tank, the Centre for Monitoring Indian Economy (CMIE), which of the following states witnessed the highest unemployment rate as of January 2022?

- Ans 1. Rajasthan
 2. Delhi
 3. Tripura
 4. Haryana

Question ID : 26433046754
Status : Answered
Chosen Option : 4

Q.10 Who is the recipient of the Abhinandan Saroja National Award 2021 by the National Institute of Indian Classical Dance?

- Ans 1. Aparna Satheesan
 2. Prabhudeva
 3. Chaya Kumar
 4. Shovana Narayan

Question ID : 26433046962
Status : Not Answered
Chosen Option : --

Q.11 Choose the most reactive metal from the options given below.

- Ans 1. Copper
 2. Zinc
 3. Sodium
 4. Iron

Question ID : **26433047523**
Status : **Answered**
Chosen Option : **3**

Q.12 Which of the following is an example of Mughal architecture under Aurangzeb?

- Ans 1. Moti Masjid, Delhi
 2. Taj Mahal, Agra
 3. Jama Masjid, Delhi
 4. Qutab Minar, Delhi

Question ID : **26433047022**
Status : **Answered**
Chosen Option : **1**

Q.13 Which of the following was set up in 1956 by the Indian government by nationalising all the existing private sector life insurance companies?

- Ans 1. New India Insurance Company of India Limited
 2. General Insurance Corporation
 3. Life Insurance Corporation of India
 4. United India Insurance Company Limited

Question ID : **26433046892**
Status : **Answered**
Chosen Option : **3**

Q.14 Who among the following won a bronze medal in the Summer Olympics 2020 (played in 2021)?

- Ans 1. Ravi Dahiya
 2. Neeraj Chopra
 3. PV Sindhu
 4. Mirabai Chanu

Question ID : **26433047390**
Status : **Answered**
Chosen Option : **3**

Q.15 India and Sri Lanka are joined by a group of islets forming _____.

- Ans 1. Mahatma Gandhi Setu
 2. Sisseri River Bridge
 3. Bhupen Hazarika Bridge
 4. Adam's Bridge

Question ID : 26433046953
Status : Answered
Chosen Option : 4

Q.16 Which of the following was a revolutionary organisation formed outside India in 1913?

- Ans 1. Bharatiya Janata Party
 2. Simon Commission
 3. Ghadar Party
 4. Indian National Congress

Question ID : 26433046958
Status : Answered
Chosen Option : 3

Q.17 Which animal was the official mascot of the ICC Cricket World Cup 2011?

- Ans 1. Elephant
 2. Horse
 3. Lion
 4. Tiger

Question ID : 26433047090
Status : Marked For Review
Chosen Option : 4

Q.18 Which TMC candidate won the Asansol (West Bengal) by-poll election in April 2022?

- Ans 1. Mamata Banerjee
 2. Agnimitra Paul
 3. Shatrughan Sinha
 4. Rahul Gandhi

Question ID : 26433046869
Status : Answered
Chosen Option : 2

Q.19 Which of the following ports is known as 'Diamond Harbour'?

- Ans 1. Port Blair
 2. Kochi
 3. Kolkata
 4. Mangalore

Question ID : 26433047027
Status : Answered
Chosen Option : 3

Q.20 Indian shooter and gold medallist Abhinav Bindra's autobiographical book is called

- Ans**
- 1. Shots Fired
 - 2. Hunting the Hard Way
 - 3. Firing Point
 - 4. A Shot at History

Question ID : 26433046885
Status : Answered
Chosen Option : 4

Q.21 Which of the following socio religious communities was founded by Raja Ram Mohan Roy?

- Ans**
- 1. Akali Dal
 - 2. Prarthana Samaj
 - 3. Arya Samaj
 - 4. Brahmo Samaj

Question ID : 26433046884
Status : Answered
Chosen Option : 4

Q.22 Which of the following is an example of Phylum Mollusca of the animal kingdom?

- Ans**
- 1. Octopus
 - 2. Sea horse
 - 3. Dolphin
 - 4. King crab

Question ID : 26433046874
Status : Not Answered
Chosen Option : --

Q.23 According to the census 2011, which state is the most populous state in India?

- Ans**
- 1. Uttar Pradesh
 - 2. Rajasthan
 - 3. Kerala
 - 4. Madhya Pradesh

Question ID : 26433047704
Status : Answered
Chosen Option : 1

Q.24 The Delhi Municipal Corporation (Amendment) Bill, 2022 was proposed in Lok Sabha by the Ministry of _____.

- Ans**
- 1. Law and Justice
 - 2. Defence
 - 3. Social justice and Empowerment
 - 4. Home Affairs

Question ID : **26433047018**
Status : **Answered**
Chosen Option : **4**

Q.25 Which natural compound helps in photosynthesis of plants?

- Ans**
- 1. Chlorophyll
 - 2. Glucose
 - 3. curcumin
 - 4. Lectin

Question ID : **26433046950**
Status : **Answered**
Chosen Option : **1**