

Adapt17

Delhi Police [Constable] Previous Year Paper

Section : Part A- General Knowledge or Current Affairs

Q.1 On 21 August 2020, former Finance Secretary Rajiv Kumar was appointed as:

- Ans**
- 1. the Election Commissioner
 - 2. a member of UPSC
 - 3. the Defence Secretary
 - 4. the Secretary of State for Education

Question ID : 6549783871
Status : Answered
Chosen Option : 1

Q.2 Pandit Jasraj was related to which of the following fields?

- Ans**
- 1. Fiction writing
 - 2. Classical instrument
 - 3. Classical singing
 - 4. Classical dance

Question ID : 6549783857
Status : Not Answered
Chosen Option : --

Q.3 To treat the eye disease known as myopia or near sightedness, which of the following lenses is used?

- Ans**
- 1. Convex lens
 - 2. Concave lens
 - 3. Bifocal lens
 - 4. Compound lens

Question ID : 6549783889
Status : Answered
Chosen Option : 2

Q.4 The 101st Amendment to the Indian Constitution is concerned with:

- Ans
- 1. Citizenship Act
 - 2. Goods and Services Tax (GST)
 - 3. Right to Work
 - 4. Fundamental Rights

Question ID : **6549783885**
Status : **Answered**
Chosen Option : **2**

Q.5 The headquarters of National Bank of Agriculture and Rural Development (NABARD) is situated at:

- Ans
- 1. Delhi
 - 2. Kolkata
 - 3. Mumbai
 - 4. Bengaluru

Question ID : **6549783876**
Status : **Answered**
Chosen Option : **4**

Q.6 The horizontal rows in Mendeleev's periodic table are called as:

- Ans
- 1. Periods
 - 2. Gradation
 - 3. Subgroups
 - 4. Groups

Question ID : **6549783887**
Status : **Answered**
Chosen Option : **1**

Q.7 Who are the authors of the book, 'The Book of Gutsy Women'?

- Ans
- 1. Jokha Alharthi and Michael Wood
 - 2. Michelle Obama and Barak Obama
 - 3. Hillary Clinton and Bill Clinton
 - 4. Hillary Clinton and Chelsea Clinton

Question ID : **6549783870**
Status : **Not Answered**
Chosen Option : **--**

Q.8 How many members are nominated by the President of India to the Rajya Sabha (Council of States)?

- Ans
- 1. 15
 - 2. 2
 - 3. 10
 - 4. 12

Question ID : 6549783884
Status : Answered
Chosen Option : 4

Q.9 The Constituent Assembly which had been elected for the framing of the Constitution held its first meeting on:

- Ans
- 1. 15 December 1947
 - 2. 15 August 1947
 - 3. 9 December 1946
 - 4. 9 December 1947

Question ID : 6549783881
Status : Answered
Chosen Option : 3

Q.10 Who among the following acts as the Chairman of the GST (Goods and Services Tax) Council?

- Ans
- 1. Prime Minister of India
 - 2. Union Finance Minister
 - 3. Chief Cabinet Secretary
 - 4. Union Finance Secretary

Question ID : 6549783875
Status : Answered
Chosen Option : 2

Q.11 Which international organisation is the current governing body of Badminton?

- Ans
- 1. Badminton World Federation
 - 2. International Badminton Committee
 - 3. International Paralympic Committee
 - 4. International Olympic Committee

Question ID : 6549783864
Status : Answered
Chosen Option : 1

Q.12 'Bibi ka Maqbara' is a famous historical monument situated in:

- Ans
- 1. Bhopal, Madhya Pradesh
 - 2. Lucknow, Uttar Pradesh
 - 3. Aurangabad, Maharashtra
 - 4. Vijayawada, Andhra Pradesh

Question ID : 6549783860
Status : Answered
Chosen Option : 3

Q.13 आर्थिक सर्वेक्षण 2019-2020 की मुख्य विषय-वस्तु निम्नलिखित में से क्या है?

- Ans
- 1. वित्तीय समावेशन
 - 2. रोज़गार सृजन
 - 3. हरित अर्थव्यवस्था
 - 4. संपत्ति निर्माण

Question ID : 6549783878
Status : Answered
Chosen Option : 3

Q.14 Which of the following instruments is used to measure the blood pressure in humans?

- Ans
- 1. Galvanometer
 - 2. Diopter
 - 3. Blood meter
 - 4. Sphygmomanometer

Question ID : 6549783890
Status : Answered
Chosen Option : 2

Q.15 During the 1920s, the 'Self-respect movement' took place in which state of India?

- Ans
- 1. Tamil Nadu
 - 2. Uttar Pradesh
 - 3. West Bengal
 - 4. Maharashtra

Question ID : 6549783906
Status : Not Answered
Chosen Option : --

Q.16 Who is the chairman of the 15th Finance Commission of India?

- Ans 1. Nand Kishore Singh
 2. YV Reddy
 3. Vipul Krishna
 4. Nishikant Das

Question ID : 6549783873
Status : Answered
Chosen Option : 1

Q.17 Which part of the Indian Constitution deals with the Directive Principles of State Policy?

- Ans 1. Part 2
 2. Part 5
 3. Part 3
 4. Part 4

Question ID : 6549783883
Status : Answered
Chosen Option : 4

Q.18 What is the chemical name for vitamin B12?

- Ans 1. Thiamin
 2. Riboflavin
 3. Cobalamin
 4. Niacin

Question ID : 6549783892
Status : Not Answered
Chosen Option : --

Q.19 Which of the following regions of India is famous for its folk dance called 'Shondol Dance'?

- Ans 1. Uttarakhand
 2. Arunachal Pradesh
 3. Ladakh
 4. Karnataka

Question ID : 6549783858
Status : Not Answered
Chosen Option : --

Q.20 Who among the following has been elected as the Prime Minister of Sri Lanka in August 2020?

- Ans
- 1. Maitripal Sirisena
 - 2. M Premdasa
 - 3. Mahindra Rajapaksa
 - 4. Gotabaya Rajapaksa

Question ID : 6549783869
Status : Answered
Chosen Option : 3

Q.21 Who among the following moved the historic 'Objectives Resolution' in the Constituent Assembly of India?

- Ans
- 1. KM Munshi
 - 2. Rajendra Prasad
 - 3. Maulana Abul Kalam Azad
 - 4. Jawaharlal Nehru

Question ID : 6549783882
Status : Not Answered
Chosen Option : --

Q.22 Who among the following had been appointed as the CEO of Google's parent company Alphabet Inc. in December 2019?

- Ans
- 1. Jeff Bezos
 - 2. Sundar Pichai
 - 3. Thomas Canning
 - 4. Mark Zuckerberg

Question ID : 6549783867
Status : Answered
Chosen Option : 2

Q.23 The famous 'Ramosi Uprising' against the British Rule took place in India during the latter half of the 19th century. From the following options, identify the region where it occurred.

- Ans
- 1. Bundelkhand region
 - 2. Chota Nagpur region
 - 3. Western Maharashtra
 - 4. Southern region of India

Question ID : 6549783900
Status : Not Answered
Chosen Option : --

Q.24 Who among the following shifted his capital from Delhi to Daulatabad?

- Ans
- 1. Qutubuddin Aibak
 - 2. Alauddin Khalji
 - 3. Muhammad Bin Tughluq
 - 4. Ibrahim Lodi

Question ID : 6549783905
Status : Answered
Chosen Option : 3

Q.25 The famous hill station 'Pachmarhi' in Madhya Pradesh is situated in which of the following mountain ranges?

- Ans
- 1. Aravali mountain range
 - 2. Satpura mountain range
 - 3. PirPanjal mountain range
 - 4. Shivalik mountain range

Question ID : 6549783894
Status : Answered
Chosen Option : 2

Q.26 Which of the following type of soils in India is locally known as 'Regur soil'?

- Ans
- 1. Red soil
 - 2. Forest soil
 - 3. Black cotton soil
 - 4. Alluvial soil

Question ID : 6549783896
Status : Answered
Chosen Option : 1

Q.27 When did Mahatma Gandhi launch the Quit India Movement?

- Ans
- 1. 8 August 1946
 - 2. 8 August 1942
 - 3. 8 August 1944
 - 4. 8 August 1932

Question ID : 6549783901
Status : Answered
Chosen Option : 2

Q.28 Where in India is the famous Dhamek Stupa located?

- Ans 1. Sarnath, Uttar Pradesh
 2. Ujjain, Madhya Pradesh
 3. Bhagalpur, Bihar
 4. Gangtok, Sikkim

Question ID : 6549783861
Status : Answered
Chosen Option : 1

Q.29 Which of the following is the second largest ocean in the world?

- Ans 1. Atlantic Ocean
 2. Pacific Ocean
 3. Indian Ocean
 4. Antarctic Ocean

Question ID : 6549783895
Status : Answered
Chosen Option : 1

Q.30 In December 2019, the famous Spanish top division football League 'La Liga' for the first time in its history named a non-footballer as its brand ambassador. Identify the sportsperson from the given options.

- Ans 1. MS Dhoni
 2. Gita Phogat
 3. Rohit Sharma
 4. Mary Kom

Question ID : 6549783866
Status : Not Answered
Chosen Option : --

Q.31 In which city did the Khelo India Youth Games 2020 take place?

- Ans 1. Delhi
 2. Lucknow, Uttar Pradesh
 3. Guwahati, Assam
 4. Pune, Maharashtra

Question ID : 6549783865
Status : Answered
Chosen Option : 4

Q.32 The river 'Son' is a tributary of which of the following rivers?

- Ans 1. Ganga
 2. Yamuna
 3. Narmada
 4. Mahanadi

Question ID : 6549783893
Status : Answered
Chosen Option : 1

Q.33 Who among the following was appointed as Controller General of Accounts of India in 2019?

- Ans 1. PK Sinha
 2. Soma Roy Burman
 3. Pradip Mishra
 4. Arundhati Basak

Question ID : 6549783872
Status : Answered
Chosen Option : 1

Q.34 Gross Domestic Product (GDP) measured at market prices or current prices is called as:

- Ans 1. Nominal GDP
 2. Real GDP
 3. Actual GDP
 4. Practical GDP

Question ID : 6549783879
Status : Answered
Chosen Option : 2

Q.35 When was the Fiscal Responsibility and Budget Management Act (FRBM Act) approved by the Parliament?

- Ans 1. 2007
 2. 2003
 3. 2004
 4. 2006

Question ID : 6549783877
Status : Answered
Chosen Option : 3

Q.36 In which state of India is the 'Bihu festival' celebrated?

- Ans
- 1. Arunachal Pradesh
 - 2. Nagaland
 - 3. Assam
 - 4. Meghalaya

Question ID : 6549783862
Status : Answered
Chosen Option : 3

Q.37 Which acid is produced in the human stomach to help the digestion of food?

- Ans
- 1. Sulphuric acid
 - 2. Tartaric acid
 - 3. Nitric acid
 - 4. Hydrochloric acid

Question ID : 6549783888
Status : Answered
Chosen Option : 2

Q.38 The Commission for Agriculture Cost and Prices (CACP), earlier named as Agriculture Prices Commission, was established in:

- Ans
- 1. January 1965
 - 2. January 1956
 - 3. December 1965
 - 4. December 1975

Question ID : 6549783880
Status : Answered
Chosen Option : 4

Q.39 The term 'Yellow Revolution' is related to which of the following sectors in India?

- Ans
- 1. Fisheries production
 - 2. Oil seeds production
 - 3. Fruit production
 - 4. Rice production

Question ID : 6549783897
Status : Answered
Chosen Option : 2

Q.40 'Wood's Dispatch' sent by the British Government in India in 1854 was related to which sector?

- Ans
- 1. Political matters of India
 - 2. Indian education
 - 3. Development of railways in India
 - 4. Industrial growth in India

Question ID : 6549783904
Status : Answered
Chosen Option : 2

Q.41 Which of the following periods is considered as a period of steady population growth in India?

- Ans
- 1. 1981-2001
 - 2. 1921-1951
 - 3. 1951-1981
 - 4. 1991-2011

Question ID : 6549783898
Status : Answered
Chosen Option : 4

Q.42 The famous 'Hornbill festival' is celebrated in which state of India?

- Ans
- 1. Nagaland
 - 2. Himachal Pradesh
 - 3. Sikkim
 - 4. Kerala

Question ID : 6549783859
Status : Not Answered
Chosen Option : --

Q.43 The 'Polly Umrigar Award' is conferred in which sports category?

- Ans
- 1. Football
 - 2. Hockey
 - 3. Badminton
 - 4. Cricket

Question ID : 6549783863
Status : Not Answered
Chosen Option : --

Q.44 Who is the recipient of the 28th Saraswati Samman for 2018?

- Ans
- 1. K Dinkar Rao
 - 2. K Siva Reddy
 - 3. Bhalchandra Nemade
 - 4. Nasir Sharma

Question ID : 6549783868
Status : Not Answered
Chosen Option : --

Q.45 Recently in March 2020 two public sector banks namely, the Oriental Bank of Commerce, and the United Bank of India were merged into another public sector bank. What is the name of that bank?

- Ans
- 1. Punjab National Bank
 - 2. Bank of Baroda
 - 3. Union Bank of India
 - 4. State Bank of India

Question ID : 6549783874
Status : Answered
Chosen Option : 1

Q.46 Which of the following is a name of the bone in human leg?

- Ans
- 1. Incus
 - 2. Stapes
 - 3. Patella
 - 4. Malleus

Question ID : 6549783891
Status : Not Answered
Chosen Option : --

Q.47 In which article of the Indian Constitution is the procedure for the impeachment of the President given?

- Ans
- 1. Article 61
 - 2. Article 69
 - 3. Article 52
 - 4. Article 56

Question ID : 6549783886
Status : Answered
Chosen Option : 4

Q.48 To which part of ancient and medieval India is the 'Sangam Literature' related?

- Ans
- 1. North India
 - 2. East India
 - 3. North-East India
 - 4. South India

Question ID : 6549783899
Status : Answered
Chosen Option : 3

Q.49 In which of the following states did the famous 'Moplah revolt' take place during the freedom struggle?

- Ans
- 1. Uttar Pradesh
 - 2. Orissa
 - 3. Bihar
 - 4. Kerala

Question ID : 6549783903
Status : Not Answered
Chosen Option : --

Q.50 Which of the following was a famous port town during the Indus Valley Civilization era?

- Ans
- 1. Lothal
 - 2. Mohenjodaro
 - 3. Harappa
 - 4. Dholavira

Question ID : 6549783902
Status : Answered
Chosen Option : 1

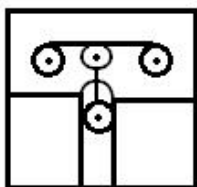
Section : Part B- Reasoning

Q.1 Select the option in which the given figure is embedded (rotation is NOT allowed).

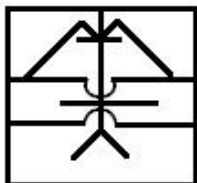


Ans

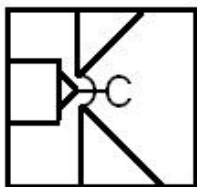
✓ 1.



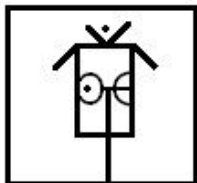
✗ 2.



✗ 3.



✗ 4.

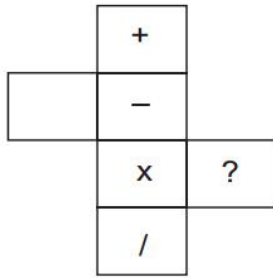


Question ID : 6549783926

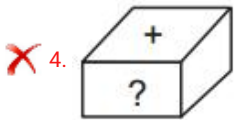
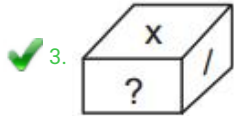
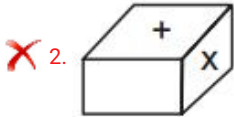
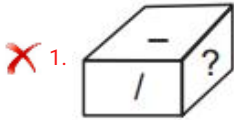
Status : Answered

Chosen Option : 1

Q.2 Select the box that is similar to the box formed from the given sheet of paper when it is folded.



Ans

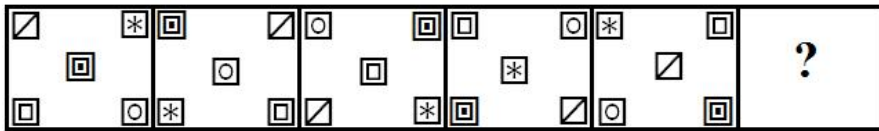


Question ID : 6549783929

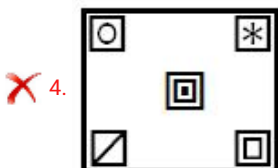
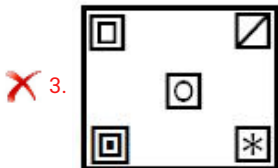
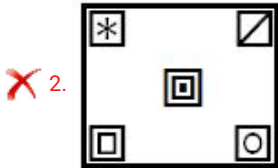
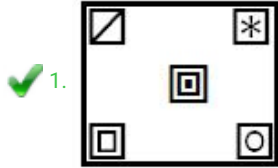
Status : Answered

Chosen Option : 3

Q.3 Which figure will replace the question mark (?) in the following figure series?



Ans



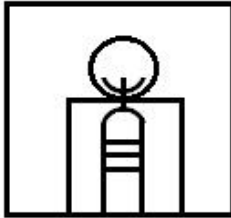
Question ID : 6549783920
 Status : Answered
 Chosen Option : 1

Q.4 Select the option in which the given figure is embedded (rotation is NOT allowed).

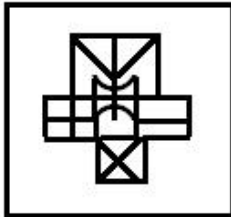


Ans

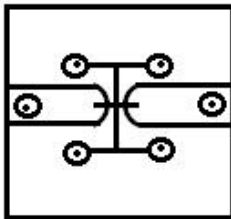
✗ 1.



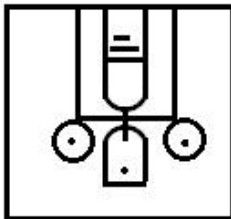
✓ 2.



✗ 3.



✗ 4.



Question ID : 6549783927

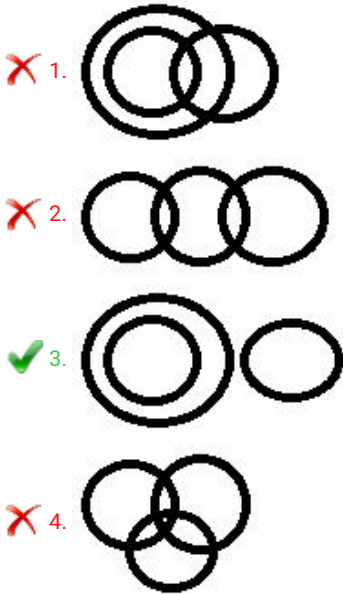
Status : Answered

Chosen Option : 2

Q.5 Select the Venn diagram that best illustrates the relationship between the following classes.

Deer, Herbivorous, Cheetah

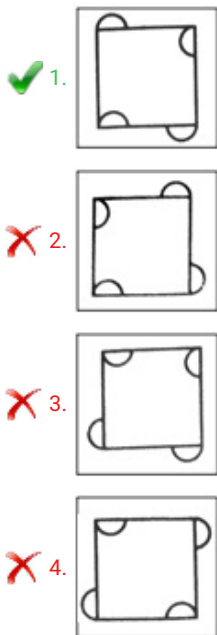
Ans



Question ID : 6549783930
Status : Answered
Chosen Option : 3

Q.6 Three of the following four figures are alike in a certain way and one is different. Select the odd one.

Ans



Question ID : 6549783916
Status : Answered
Chosen Option : 1

Q.7 Which number will replace the question mark (?) in the following series?

3, 15, 30, 46, 75, 115, 186, 286, ?

- Ans
- 1. 432
 - 2. 423
 - 3. 443
 - 4. 434

Question ID : 6549783911
Status : Answered
Chosen Option : 4

Q.8 Select the option that is related to the third number in the same way as the second number is related to the first number.

42 : 92 :: 72 : ?

- Ans
- 1. 152
 - 2. 215
 - 3. 125
 - 4. 251

Question ID : 6549783912
Status : Answered
Chosen Option : 1

Q.9 Which number will replace the question mark (?) in the following series?

7, 11, 20, 35, 70, 133, 268, ?

- Ans
- 1. 527
 - 2. 572
 - 3. 752
 - 4. 725

Question ID : 6549783910
Status : Answered
Chosen Option : 1

Q.10 Read the below statements disregarding commonly known facts, and then from the given four options, identify the Venn diagram that correctly represents the statements.

Statements:

1) Some Boats are Cars.

2) All Cars are Toys.

Ans



Question ID : 6549783931

Status : Answered

Chosen Option : 4

Q.11 नीचे दिए गए चार शब्दों में से तीन एक निश्चित प्रकार से समान हैं और एक भिन्न है। उस भिन्न विकल्प का चयन करें।

Ans ✓ 1. पालक

✗ 2. प्याज

✗ 3. मूली

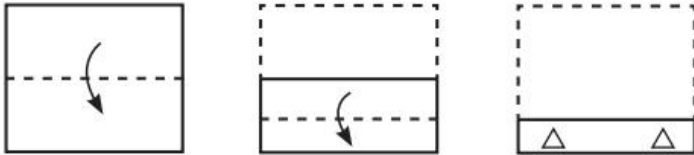
✗ 4. शलजम

Question ID : 6549783908

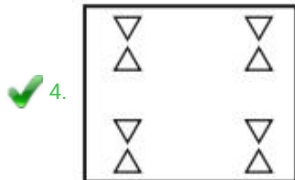
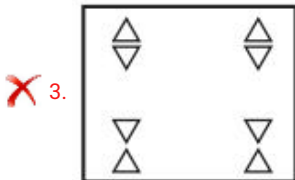
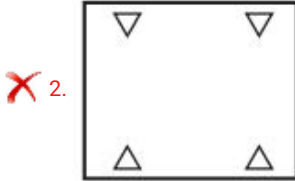
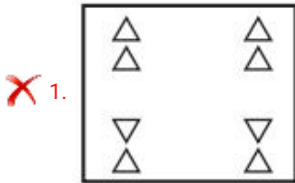
Status : Answered

Chosen Option : 1

Q.12 A paper is folded and cut as shown below. How will it appear when unfolded?



Ans

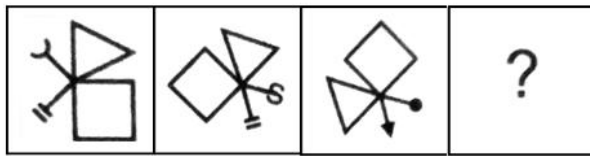


Question ID : 6549783925

Status : Answered

Chosen Option : 4

Q.13 Select the option that is related to figure C in the same way as figure B is related to figure A.



A


B

C

D

Ans


✗ 1.




✗ 2.



✗ 3.




✓ 4.



Question ID : 6549783918
Status : Answered
Chosen Option : 2

Q.14 Select the option figure that can replace the question mark (?) to complete the pattern in the question figure.



Ans

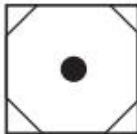
✓ 1.



✗ 2.



✗ 3.



✗ 4.



Question ID : 6549783923

Status : Answered

Chosen Option : 1

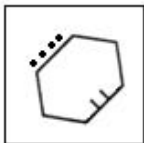
Q.15 Three of the following four figures are alike in a certain way and one is different. Select the odd one.

Ans

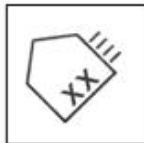
✓ 1.



✗ 2.



✗ 3.



✗ 4.



Question ID : 6549783917

Status : Answered

Chosen Option : 3

Q.16 Select the set in which the numbers are related in the same way as are the numbers of the following set.

(26, 8, 36)

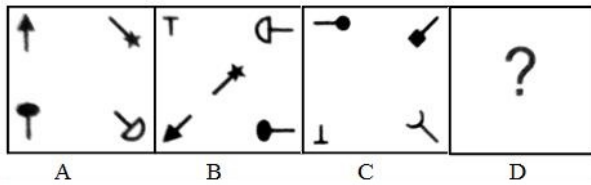
- Ans**
- 1. (33, 6, 54)
 - 2. (22, 15, 41)
 - 3. (24, 2, 66)
 - 4. (19, 2, 25)

Question ID : 6549783913

Status : Answered

Chosen Option : 2

Q.17 Select the option that is related to figure C in the same way as figure B is related to figure A.



Ans

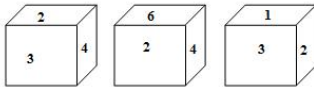
- 1.
- 2.
- 3.
- 4.

Question ID : 6549783919

Status : Answered

Chosen Option : 1

Q.18 Three different positions of the same dice are shown. Select the number on the face opposite the face showing '3'.



- Ans
- 1. 5
 - 2. 4
 - 3. 2
 - 4. 6

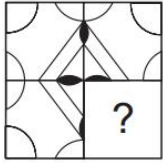
Question ID : 6549783928
Status : Answered
Chosen Option : 4

Q.19 If SYNTAX is coded as 8213713 and MOULD is coded as 14461523, then how will DESIGN be coded?

- Ans
- 1. 232832013
 - 2. 235892013
 - 3. 45892013
 - 4. 42832014

Question ID : 6549783909
Status : Answered
Chosen Option : 2

Q.20 Select the option figure that can replace the question mark (?) to complete the pattern in the question figure.



Ans

1.



2.



3.



4.



Question ID : 6549783922

Status : Answered

Chosen Option : 3

Q.21 'मोतियाबिंद' का 'आँख' से वही संबंध है, जो संबंध 'छाजन' (Eczema) का '_____ ' से है।

Ans

1. पैर

2. जीभ

3. त्वचा

4. कान

Question ID : 6549783907

Status : Answered

Chosen Option : 2

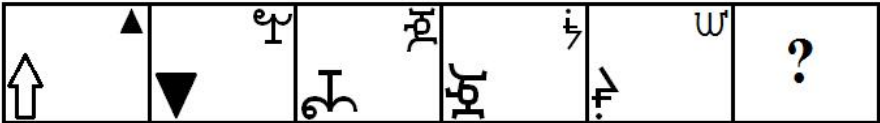
Q.22 Select the correct mirror image of the given combination when the mirror is placed to the right side of it.

CHARACTER

- Ans
- 1. CHAVBCVLEK
 - 2. CHVAVBCLEK
 - 3. RETCARYAHN
 - 4. RETACRYAHO

Question ID : 6549783924
 Status : Answered
 Chosen Option : 3

Q.23 Which figure will replace the question mark (?) in the following figure series?



Ans

- 1.
- 2.
- 3.
- 4.

Question ID : 6549783921
 Status : Answered
 Chosen Option : 2

Q.24 Which two signs should be interchanged to make the given equation correct?

$$784 - 4 + 18 \times 16 \div 84 = 400$$

- Ans
- 1. \times and \div
 - 2. $-$ and $+$
 - 3. $-$ and \div
 - 4. \times and $+$

Question ID : 6549783914
Status : Answered
Chosen Option : 3

Q.25 A tourist mini bus travelled from Nagpur to Shirdi without stopping. It covered the first 50 miles of the journey at an average speed of 25 mph. What was the bus's average speed (in mph) for the remaining 130 miles, if its overall average speed was 45 mph?

- Ans
- 1. 65
 - 2. 28
 - 3. 50
 - 4. 40

Question ID : 6549783915
Status : Answered
Chosen Option : 3

Section : Part C- Numerical Ability

Q.1 The price of an item decreases by 10% every year. If the difference between its prices at the end of the 4th year and 5th year is ₹52.65, then 90% of its price at the end of the 2nd year is:

- Ans
- 1. ₹585
 - 2. ₹540
 - 3. ₹612
 - 4. ₹630

Question ID : 6549783937
Status : Answered
Chosen Option : 1

Q.2 A is 48% more than B, and C is 30% less than the sum of A and B. By what percentage is C more than A (correct to one decimal place)?

- Ans
- 1. 16.9
 - 2. 17.3
 - 3. 14.7
 - 4. 15.2

Question ID : 6549783936
Status : Not Answered
Chosen Option : --

Q.3 By selling 32 articles, a shopkeeper gains the selling price of 12 articles. His gain percentage is:

Ans

1. $31\frac{1}{4}\%$

2. $50\frac{1}{2}\%$

3. 60%

4. 64%

Question ID : 6549783939

Status : Answered

Chosen Option : 1

Q.4 Let x be the greatest 4-digit number which when divided by 4, 5, 6, 7 and 9, the remainder in each case is 1. What is the sum of the digits of x?

Ans

1. 19

2. 18

3. 21

4. 16

Question ID : 6549783932

Status : Not Answered

Chosen Option : --

Q.5 A cylindrical bucket of radius 96 cm and height 54 cm is filled with sand. The bucket is emptied on the ground and a conical heap of base radius x cm is formed. If the height of the heap is 72 cm, then what is the value of x?

Ans

1. 108

2. 196

3. 144

4. 120

Question ID : 6549783946

Status : Answered

Chosen Option : 2

Q.6 A person rows 30 km upstream and the same distance downstream. The total time taken by him for this whole journey is $3\frac{1}{5}$ hours. If the speed of the stream is 5 km/h, then in how many hours does the person row a distance of 144 km upstream?

Ans

1. 9.6

2. 8.4

3. 10

4. 9

Question ID : 6549783944

Status : Answered

Chosen Option : 4

Q.7 If a sum of ₹4,648 is divided into three parts such that 4 times the first part is equal to 5 times the second part and 7 times the third part, then the difference between the second and third part is:

- Ans
- 1. ₹336
 - 2. ₹448
 - 3. ₹840
 - 4. ₹504

Question ID : 6549783940
Status : Answered
Chosen Option : 4

Q.8 The average of ten numbers is 72.8. The average of the first six numbers is 88.5 and the average of the last five numbers is 64.4. If the 6th number is excluded, then what is the average of the remaining numbers?

- Ans
- 1. 65.8
 - 2. 66.5
 - 3. 67
 - 4. 66

Question ID : 6549783934
Status : Answered
Chosen Option : 2

Q.9 Pipe A is a filling pipe, while B and C are emptying pipes. Pipe A alone can fill a tank in 10 hours and pipe C alone can empty the full tank in 24 hours. If all three pipes are opened together, the tank is completely filled in 40 hours. In how many hours can pipe B alone empty two-third part of the tank?

- Ans
- 1. 24
 - 2. 20
 - 3. 18
 - 4. 30

Question ID : 6549783943
Status : Answered
Chosen Option : 4

Q.10 A sum amounts to ₹37,044 in 3 years at 5% p.a., interest being compounded yearly. If the same sum amounts to ₹x in 2 years at 15% p.a. when the interest is compounded 8-monthly, then the value of x (in ₹) is:

- Ans
- 1. 40,174
 - 2. 39,930
 - 3. 41,261
 - 4. 42,592

Question ID : 6549783942
Status : Not Answered
Chosen Option : --

Q.11 In a division sum, the divisor is 14 times the quotient and 7 times the remainder. If the remainder is 34, then the dividend is:

- Ans 1. 4063
 2. 4080
 3. 4097
 4. 4114

Question ID : 6549783933

Status : Answered

Chosen Option : 2

Q.12 The value of $\left(\frac{2}{3} \div 1\frac{3}{5} \text{ of } \frac{5}{9} - \frac{5}{9}\right) + \frac{3}{4} - \frac{5}{11} (0.7\bar{2} \div 0.\overline{65})$ is:

- Ans 1. $\frac{5}{4}$
 2. $\frac{25}{36}$
 3. $\frac{4}{9}$
 4. $\frac{17}{18}$

Question ID : 6549783935

Status : Answered

Chosen Option : 3

Q.13 The area of a circular garden is equal to $\frac{11}{15}$ of the area of a triangular field whose sides are 80 m, 84 m and 116 m. What is the perimeter (in m) of the garden? (Take $\pi = \frac{22}{7}$)

- Ans 1. 154
 2. 176
 3. 220
 4. 132

Question ID : 6549783945

Status : Not Answered

Chosen Option : --

Q.14 A certain sum amounts to ₹13,860 after 5 years and to ₹16,776 after 8 years at the same rate per cent per annum at simple interest. What will be simple interest (in ₹) on a sum of ₹10,000 for $4\frac{2}{5}$ years at the same rate?

- Ans 1. 4,650
 2. 4,684
 3. 4,774
 4. 4,752

Question ID : 6549783941

Status : Not Answered

Chosen Option : --

Q.15 Remu marks an article at ₹36.50 above the cost price. She incurs a loss of 20% when she sells the article after allowing 36% discount on its marked price. What is the cost price of the article?

- Ans
- 1. ₹148
 - 2. ₹146
 - 3. ₹154
 - 4. ₹160

Question ID : 6549783938
Status : Not Answered
Chosen Option : --

Section : Part D- Computer Proficiency

Q.1 Which of the following is used to change the text colour in an MS Word document?

- Ans
- 1. Text highlight color
 - 2. Font color
 - 3. Shading
 - 4. Styles

Question ID : 6549783952
Status : Answered
Chosen Option : 2

Q.2 Which of the following option can be used to change the column width of a table in MS Word?

- Ans
- 1. Alignment
 - 2. Title bar
 - 3. Scroll bar
 - 4. Ruler

Question ID : 6549783951
Status : Answered
Chosen Option : 1

Q.3 In an MS Excel sheet, a cell address is composed of the _____.

- Ans
- 1. cell's row
 - 2. worksheet number
 - 3. cell's column
 - 4. cell's column and row

Question ID : 6549783947
Status : Answered
Chosen Option : 4

Q.4 Which of the following icon is used to add an attachment to an email?

- Ans
- 1. Stationery icon
 - 2. Paper clip icon
 - 3. GIF icon
 - 4. Emoji icon

Question ID : 6549783954
Status : Answered
Chosen Option : 2

Q.5 Which of the following is the slowest type of internet service?

- Ans
- 1. Dial-up
 - 2. 3G and 4G
 - 3. Satellite
 - 4. Digital Subscriber Line

Question ID : 6549783955
Status : Answered
Chosen Option : 1

Q.6 _____ was the first web browser to implement the omnibox.

- Ans
- 1. Mozilla Firefox
 - 2. Safari
 - 3. Lynx
 - 4. Google Chrome

Question ID : 6549783956
Status : Answered
Chosen Option : 4

Q.7 Which of the following is used to move an active cell to the first column on the current row?

- Ans
- 1. Page up
 - 2. Ctrl + Home
 - 3. Page down
 - 4. Home

Question ID : 6549783948
Status : Answered
Chosen Option : 4

Q.8 Which of the following is NOT a valid MS Excel 2007 formula?

- Ans
- 1. SUMPRODUCT
 - 2. SUMIF
 - 3. SUM
 - 4. SUMADD

Question ID : 6549783949
Status : Answered
Chosen Option : 4

Q.9 Which of the following keyboard shortcut is used to insert a hyperlink in an MS Word 2007 document?

- Ans
- 1. Alt + K
 - 2. Ctrl + Return
 - 3. Ctrl + K
 - 4. Alt + =

Question ID : 6549783953
Status : Answered
Chosen Option : 3

Q.10 _____ is NOT a valid option of office button in MS Word 2007.

- Ans
- 1. Print
 - 2. Save As
 - 3. Save
 - 4. Presentation

Question ID : 6549783950
Status : Answered
Chosen Option : 4