

Delhi Police [Constable]

Previous Year Paper

Section : Part A- General Knowledge or Current Affairs

Q.1 'Samaveda' is considered to be one of the primary sources of Indian _____.

- Ans
- 1. coinage
 - 2. textile design
 - 3. medicine
 - 4. music and art

Question ID : 4244291774
Status : Not Answered
Chosen Option : --

Q.2 Which of the following places is associated with the tomb of Jahangir?

- Ans
- 1. Karachi
 - 2. Agra
 - 3. Lahore
 - 4. Delhi

Question ID : 4244291732
Status : Answered
Chosen Option : 2

Q.3 Digboi Oil Refinery, commissioned on 11th December 1901, is India's oldest operating refinery and one of the oldest operating refineries in the world. It is located in _____.

- Ans
- 1. Assam
 - 2. Gujarat
 - 3. Odisha
 - 4. Uttar Pradesh

Question ID : 4244291769
Status : Answered
Chosen Option : 1

Q.4 Which of the following statements is correct regarding the term 'pietra - dura'?

- Ans 1. It was a technique for the inlay of precious stones and gems into stone walls.
 2. It was a style of gardening.
 3. It was a form of Hindustani classical music played in the courts of Delhi Sultans.
 4. It was a type of painting style carried out on palm leaves.

Question ID : 4244291731
Status : Not Answered
Chosen Option : --

Q.5 Which of the following pairs is INCORRECTLY matched?

- Ans 1. Kuka movement – Assam
 2. Moplah rebellions – Malabar
 3. Polygar rebellions – Kurnool
 4. Faraizi movement – Bengal

Question ID : 4244291778
Status : Not Answered
Chosen Option : --

Q.6 The cheque number of a bank in India consists of _____ digits as of August 2020.

- Ans 1. five
 2. eight
 3. six
 4. seven

Question ID : 4244291748
Status : Not Answered
Chosen Option : --

Q.7 With which of the following soils are the terms 'khadar' and 'bhangar' associated?

- Ans 1. Laterite
 2. Alluvial
 3. Black
 4. Arid

Question ID : 4244291770
Status : Answered
Chosen Option : 2

Q.8 Which of the following pairs is INCORRECTLY matched?

- Ans 1. Konark - Odisha
 2. Bhimbetka - Chhattisgarh
 3. Hampi - Karnataka
 4. Fatehpur Sikri - Uttar Pradesh

Question ID : 4244291733
Status : Answered
Chosen Option : 4

Q.9 A glucometer is generally used as a monitor by a _____ patient.

- Ans 1. hypoglycemic
 2. obstetric
 3. neurological
 4. hepatitis-B

Question ID : 4244291762
Status : Not Answered
Chosen Option : --

Q.10 _____ is an instrument for measuring the relative humidity of the atmosphere.

- Ans 1. Hygrometer
 2. Barometer
 3. Hydrometer
 4. Anemometer

Question ID : 4244291767
Status : Answered
Chosen Option : 1

Q.11 Which of the followings was NOT built during the Tughlaq period?

- Ans 1. Jama Masjid
 2. Tughlaqabad
 3. Feroz Shah Kotla
 4. Khirki Masjid

Question ID : 4244291775
Status : Answered
Chosen Option : 3

Q.12 As of August 2020, who among the following is NOT an incumbent nominated member to the Rajya Sabha?

- Ans
- 1. Sonal Mansingh
 - 2. Roopa Ganguly
 - 3. Jaya Bachchan
 - 4. Subramanian Swamy

Question ID : 4244291759
Status : Not Answered
Chosen Option : --

Q.13 As of August 2020, which of the following pairs is correct with reference to the administration of the Union Territories of India?

- Ans
- 1. Ladakh – Anil Baijal
 - 2. Andaman and Nicobar Island – Dineshwar Sharma
 - 3. Delhi (NCT) – Praful Patel
 - 4. Jammu and Kashmir – Manoj Sinha

Question ID : 4244291758
Status : Not Answered
Chosen Option : --

Q.14 In September 2020, who among the following assumed charge as the Election Commissioner of India?

- Ans
- 1. Rajiv Kumar
 - 2. Arvind Pangaria
 - 3. Amitabh Kant
 - 4. Bibek Debroy

Question ID : 4244291743
Status : Answered
Chosen Option : 4

Q.15 In September 2020, the Reserve Bank of India decided to introduce the 'positive pay system' from 1 January 2021 for cheques, under which re-confirmation of key details may be needed for payments beyond _____.

- Ans
- 1. ₹50,000
 - 2. ₹75,000
 - 3. ₹55,000
 - 4. ₹60,000

Question ID : 4244291747
Status : Not Answered
Chosen Option : --

Q.16 India's rank in the Global Innovation Index 2020 is _____.

- Ans
- 1. 52nd
 - 2. 87th
 - 3. 63rd
 - 4. 48th

Question ID : 4244291742
Status : Not Answered
Chosen Option : --

Q.17 With reference to Indian music, which of the following is NOT a 'Raga'?

- Ans
- 1. Poorvi
 - 2. Shringara
 - 3. Hindol
 - 4. Bhairavi

Question ID : 4244291735
Status : Not Answered
Chosen Option : --

Q.18 How many times has the Indian Men's Cricket team entered the ODI World Cup semi-finals till 2019?

- Ans
- 1. Seven
 - 2. Five
 - 3. Eight
 - 4. Six

Question ID : 4244291738
Status : Not Answered
Chosen Option : --

Q.19 _____ is an equatorial belt of low atmospheric pressure where the trade winds converge.

- Ans
- 1. Moraine
 - 2. La Nina
 - 3. El Nino
 - 4. Doldrums

Question ID : 4244291766
Status : Answered
Chosen Option : 4

Q.20 In which year were the Commonwealth Games held in New Delhi?

- Ans 1. 2010
 2. 2006
 3. 2012
 4. 2018

Question ID : 4244291737
Status : Not Answered
Chosen Option : --

Q.21 Intensified Mission Indradhanush (IMI) 2.0 is a scheme launched by the Government of India to improve coverage in areas with low _____.

- Ans 1. nutrition
 2. digitisation
 3. immunisation
 4. education

Question ID : 4244291752
Status : Not Answered
Chosen Option : --

Q.22 The Thumba Equatorial Rocket Launching Station (TERLS) is located near _____.

- Ans 1. Somnath
 2. Thiruvananthapuram
 3. Sriharikota
 4. Chandipur

Question ID : 4244291765
Status : Answered
Chosen Option : 3

Q.23 The 11th Five-Year Plan ended in the year _____.

- Ans 1. 2010
 2. 2011
 3. 2013
 4. 2012

Question ID : 4244291751
Status : Not Answered
Chosen Option : --

Q.24 The Vyas Samman, started in 1991 is given for 'outstanding literary work' in _____.

- Ans
- 1. Rajasthani
 - 2. Hindi
 - 3. Sanskrit
 - 4. Konkani

Question ID : 4244291741
Status : Answered
Chosen Option : 3

Q.25 Which of the following pairs is INCORRECT?

- Ans
- 1. Kylian Mbappé – France
 - 2. Paolo Rossi – Spain
 - 3. Pele – Brazil
 - 4. Diego Maradona – Argentina

Question ID : 4244291739
Status : Answered
Chosen Option : 2

Q.26 Who among the following is the author of the book 'The Shadow Lines'?

- Ans
- 1. Ravish Kumar
 - 2. Amitav Ghosh
 - 3. Amish Tripathi
 - 4. Arundhati Roy

Question ID : 4244291740
Status : Not Answered
Chosen Option : --

Q.27 Pranab Mukherjee, who passed away in August 2020, served as the _____ President of India.

- Ans
- 1. 14th
 - 2. 13th
 - 3. 11th
 - 4. 12th

Question ID : 4244291744
Status : Answered
Chosen Option : 2

Q.28 National Human Rights Commission of India is an independent statutory body established on 12 October _____.

- Ans
- 1. 2002
 - 2. 1993
 - 3. 1996
 - 4. 1999

Question ID : 4244291756
Status : Not Answered
Chosen Option : --

Q.29 Which of the following books was NOT written by MK Gandhi?

- Ans
- 1. Golden Threshold
 - 2. India of My Dreams
 - 3. Indian Home Rule
 - 4. Nature Cure

Question ID : 4244291779
Status : Not Answered
Chosen Option : --

Q.30 In the context of economic system of Mughal Empire, the term 'Polaj' referred to _____.

- Ans
- 1. cash payment
 - 2. annually cultivated land
 - 3. a type of coin introduced by Akbar
 - 4. a kind of tax

Question ID : 4244291776
Status : Answered
Chosen Option : 3

Q.31 The dancing girl statue of Mohenjodaro was made of:

- Ans
- 1. silver
 - 2. gold
 - 3. iron
 - 4. bronze

Question ID : 4244291772
Status : Not Answered
Chosen Option : --

Q.32 'Operation Greens' was announced in the budget speech of _____ with an outlay of ₹500 crore to stabilise the supply of tomato, onion and potato (TOP) crops and to ensure availability of TOP crops throughout the country round the year without price volatility.

- Ans
- 1. 2015-16
 - 2. 2017-18
 - 3. 2020-21
 - 4. 2018-19

Question ID : 4244291753
Status : Answered
Chosen Option : 3

Q.33 Nephritis is a medical condition that affects the _____.

- Ans
- 1. kidney
 - 2. heart
 - 3. brain
 - 4. muscle joints

Question ID : 4244291764
Status : Answered
Chosen Option : 1

Q.34 Part _____ of the Constitution of India deals with the organisation, composition, duration, officers, procedures, privileges, powers and so on of the Parliament.

- Ans
- 1. VIII
 - 2. VI
 - 3. V
 - 4. VII

Question ID : 4244291757
Status : Not Answered
Chosen Option : --

Q.35 Who among the following was conferred the Shanti Swarup Bhatnagar Prize for Science and Technology, 2020 under the category of 'Earth, Atmosphere, Ocean and Planetary Sciences'?

- Ans
- 1. Subhadeep Chatterjee
 - 2. Vatsala Thirumalai
 - 3. Subi Jacob George
 - 4. Abhijit Mukherjee

Question ID : 4244291745
Status : Not Answered
Chosen Option : --

Q.36 In which year did the Government of India start the Central Rural Sanitation Programme?

- Ans 1. 1986
 2. 1992
 3. 1989
 4. 2014

Question ID : 4244291763
Status : **Not Answered**
Chosen Option : --

Q.37 In a photovoltaic cell which type of energy gets converted into electrical energy?

- Ans 1. Chemical
 2. Light
 3. Sound
 4. Magnetic

Question ID : 4244291760
Status : **Answered**
Chosen Option : 2

Q.38 In which of the following places is the Agrasen ki Baoli, the historical step well located?

- Ans 1. Chennai
 2. Chandigarh
 3. Kolkata
 4. Delhi

Question ID : 4244291730
Status : **Not Answered**
Chosen Option : --

Q.39 The Sharqi style of architecture belonged to the modern state of:

- Ans 1. Telangana
 2. Punjab
 3. Uttar Pradesh
 4. Himachal Pradesh

Question ID : 4244291734
Status : **Not Answered**
Chosen Option : --

Q.40 In the context of retirement benefits and related issues of an employee in India, what does EPFO stand for?

- Ans
- 1. Extensive Pension Funding Ombudsman
 - 2. Employees' Provident Fund Organisation
 - 3. Employees' Privilege Financial Operation
 - 4. Employees' Pension Fixation Organization

Question ID : 4244291749
Status : Not Answered
Chosen Option : --

Q.41 Which of the following events was one of the important reasons for the Swadeshi Movement of 1905?

- Ans
- 1. Passing of Rowlatt Act
 - 2. Partition of Bengal
 - 3. Formation of Muslim League
 - 4. Formation of Indian National Congress

Question ID : 4244291777
Status : Not Answered
Chosen Option : --

Q.42 The YONO (You Only Need One) app is an integrated digital banking platform offered by _____ to enable its users to access a variety of financial services.

- Ans
- 1. HDFC
 - 2. Punjab National Bank
 - 3. ICICI
 - 4. State Bank of India

Question ID : 4244291746
Status : Answered
Chosen Option : 4

Q.43 Which of the following is a mountain peak of the Eastern Ghats?

- Ans
- 1. Annapurna
 - 2. Deomali
 - 3. Doddabetta
 - 4. Devimala

Question ID : 4244291771
Status : Answered
Chosen Option : 3

Q.44 The ____ Committee is related to electoral reforms in India.

- Ans
- 1. Bimal Jalan
 - 2. Indrajit Gupta
 - 3. Balwantrai Mehta
 - 4. Kothari

Question ID : 4244291754
Status : Not Answered
Chosen Option : --

Q.45 In Geography, the feature of 'meander' is primarily associated with which of the following options?

- Ans
- 1. River
 - 2. Peak
 - 3. Pond
 - 4. Cliff

Question ID : 4244291768
Status : Answered
Chosen Option : 1

Q.46 What is the total regulation time duration (in minutes) of any international football match going to extra-time?

- Ans
- 1. 120
 - 2. 90
 - 3. 100
 - 4. 150

Question ID : 4244291736
Status : Answered
Chosen Option : 3

Q.47 The base rate is the minimum interest rate of a bank below which it is NOT permissible to lend, except in some cases if allowed by the ____.

- Ans
- 1. NITI Aayog
 - 2. Reserve Bank of India
 - 3. CAG
 - 4. Supreme Court

Question ID : 4244291750
Status : Not Answered
Chosen Option : --

Q.48 Which of the following pairs is correctly matched?

- Ans
- 1. Fourth Buddhist Council – Rajgriha
 - 2. First Buddhist Council – Kashmir
 - 3. Second Buddhist Council – Viratnagar
 - 4. Third Buddhist Council – Pataliputra

Question ID : 4244291773
Status : Answered
Chosen Option : 2

Q.49 The Bahujan Samaj Party was formed in 1984 under the leadership of ____.

- Ans
- 1. Vijay Bahuguna
 - 2. Mayawati
 - 3. Kanshi Ram
 - 4. Anil Agrawal

Question ID : 4244291755
Status : Not Answered
Chosen Option : --

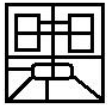
Q.50 Zika virus disease is caused by a virus transmitted primarily by ____.

- Ans
- 1. Rodents
 - 2. Aedes mosquitoes
 - 3. Dogs
 - 4. Uranotaenia mosquitoes

Question ID : 4244291761
Status : Not Answered
Chosen Option : --

Section : Part B- Reasoning

Q.1 Select the option figure which is embedded in the figure (X) given below (rotation is NOT allowed).



(X)

Ans

1.



2.



3.



4.



Question ID : 4244291800

Status : Answered

Chosen Option : 4

Q.2 Which number will replace the question mark (?) in the following series?

97, 98, 106, 133, 197, ?

Ans

1.

322

2.

267

3.

406

4.

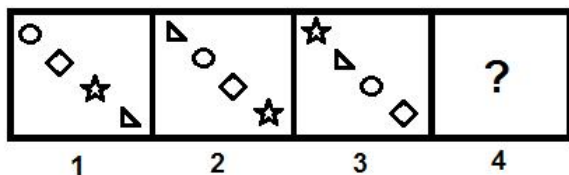
220

Question ID : 4244291784

Status : Answered


Chosen Option : 1

Q.3 Select the figure that will replace the question mark (?) in the following figure series.




Ans


✓ 1.



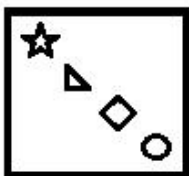
✗ 2.



✗ 3.



✗ 4.

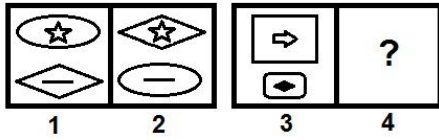


Question ID : 4244291793

Status : Answered

Chosen Option : 1

Q.4 Select the option that is related to the third figure in the same way as the second figure is related to the first figure.



Ans

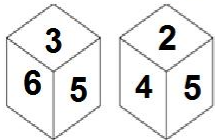
- 1.
- 2.
- 3.
- 4.

Question ID : 4244291792

Status : Answered

Chosen Option : 2

Q.5 Two different positions of the same dice are shown, the six faces of which are numbered from 1 to 6. Select the number that will be on the face opposite to the face showing '5'.



- 1. 3
- 2. 2
- 3. 1
- 4. 4

Question ID : 4244291802

Status : Answered

Chosen Option : 3

Q.6 Which two signs should be interchanged to make the given equation correct?

$$86 + 5 - 42 \div 28 \times 14 = 7$$

- Ans
- 1. \div and $-$
 - 2. \times and $+$
 - 3. \times and $-$
 - 4. \times and \div

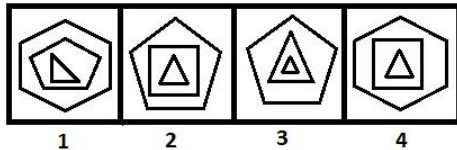
Question ID : 4244291787
Status : Answered
Chosen Option : 4

Q.7 Ravindra pays ₹4,160 as one year's interest for the amount he borrowed from his friend at the interest rate of 8% per annum. How much money did Ravindra borrow from his friend?

- Ans
- 1. ₹60,400
 - 2. ₹50,000
 - 3. ₹52,000
 - 4. ₹48,000

Question ID : 4244291788
Status : Answered
Chosen Option : 3

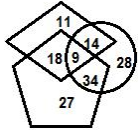
Q.8 Three of the given four figures are similar in a certain manner while one is different. Pick the odd one out.



- Ans
- 1. 3
 - 2. 1
 - 3. 2
 - 4. 4

Question ID : 4244291789
Status : Answered
Chosen Option : 2

Q.9 In the following Venn diagram, the 'pentagon' stands for 'sailors', the 'circle' stands for 'females', and the 'rhombus' stands for 'illiterate'. The given numbers represent the numbers of persons in that particular category. How many female sailors are NOT illiterate?



- Ans**
- 1. 28
 - 2. 34
 - 3. 9
 - 4. 14

Question ID : 4244291804
 Status : Answered
 Chosen Option : 2

Q.10 Select the option that is related to the third term in the same way as the second term is related to the first term.

Brazil : South America :: Sri Lanka : ?

- Ans**
- 1. Country
 - 2. Capital
 - 3. Asia
 - 4. Australia

Question ID : 4244291780
 Status : Answered
 Chosen Option : 3

Q.11 Study the given pattern carefully and select the number that can replace the question mark (?) in it.

25	52	40
14	16	15
92	152	?

- Ans**
- 1. 98
 - 2. 125
 - 3. 139
 - 4. 108

Question ID : 4244291786
 Status : Not Answered
 Chosen Option : --

Q.12 Select the correct mirror image of the given combination when the mirror is placed at 'PQ' as shown below.



Ans

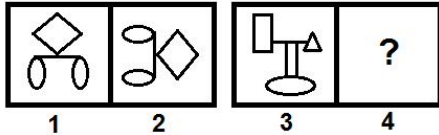
- 1. 1 s W h f S
- 2. 1 s M h f S
- 3. 1 s M h f S
- 4. 1 s M h f S

Question ID : 4244291797

Status : Answered

Chosen Option : 2

Q.13 Select the option that is related to the third figure in the same way as the second figure is related to the first figure.



Ans

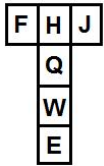
- 1.
- 2.
- 3.
- 4.

Question ID : 4244291791

Status : Answered

Chosen Option : 3

Q.14 A cube is made by folding the given sheet. In the cube so formed, which letter will be on the opposite face to the face having the letter 'F'?



- Ans
- 1. W
 - 2. E
 - 3. Q
 - 4. J

Question ID : 4244291801
Status : Answered
Chosen Option : 4

Q.15 Select the Venn diagram that best illustrates the relationship between the following classes.

Mothers, Sales Managers, Males

Ans

- 1.
- 2.
- 3.
- 4.

Question ID : 4244291803
Status : Answered
Chosen Option : 1

Q.16 Select the option that is related to the third number in the same way as the second number is related to the first number.

5573 : 20 :: 8991 : ?

- Ans
- 1. 52
 - 2. 37
 - 3. 27
 - 4. 90

Question ID : 4244291785
Status : Answered
Chosen Option : 3

Q.17 In a code language, 'DYNASTY' is written as 'NYDAYTS'. How will 'RESPOND' be written in that language?

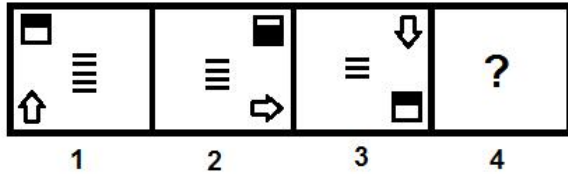
- Ans
- ✗ 1. SRENPOD
 - ✗ 2. TESPNO
 - ✓ 3. SERPDNO
 - ✗ 4. SERQDMO

Question ID : 4244291782

Status : Answered

Chosen Option : 3

Q.18 Select the figure that will replace the question mark (?) in the following figure series.



Ans

- ✗ 1.
- ✗ 2.
- ✗ 3.
- ✓ 4.

Question ID : 4244291794

Status : Answered

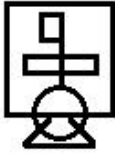
Chosen Option : 4

Q.19 Select the option in which the given figure (X) is embedded (rotation is NOT allowed).

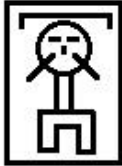


Ans

✓ 1.



✗ 2.



✗ 3.



✗ 4.



Question ID : 4244291799

Status : Answered

Chosen Option : 1

Q.20 Three of the following four letter-clusters are alike in a certain way and one is different. Pick the odd one out.

✗ 1. HEA

✓ 2. LIF

✗ 3. TQM

✗ 4. KHD

Question ID : 4244291781

Status : Answered

Chosen Option : 2

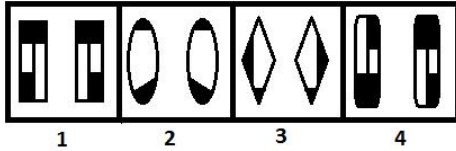
Q.21 Which number will replace the question mark (?) in the following series?

14, 17, 68, 73, 438, ?

- Ans
- 1. 876
 - 2. 166
 - 3. 405
 - 4. 445

Question ID : 4244291783
Status : Answered
Chosen Option : 4

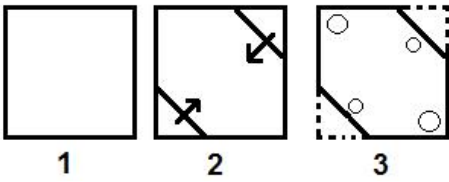
Q.22 Three of the given four figures are similar in a certain manner while one is different. Pick the odd one out.



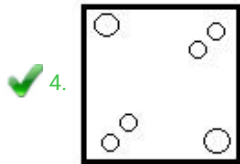
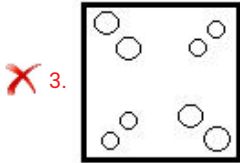
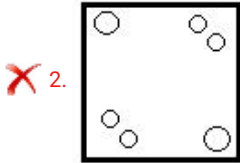
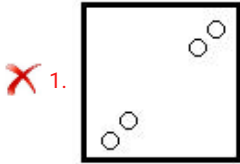
- Ans
- 1. 2
 - 2. 1
 - 3. 4
 - 4. 3

Question ID : 4244291790
Status : Not Answered
Chosen Option : --

Q.23 A paper is folded and cut as shown below. How will it appear when unfolded?



Ans




Question ID : 4244291798

Status : Answered

Chosen Option : 2

Q.24 Select the option figure that can replace the question mark (?) in the given figure to complete the pattern.

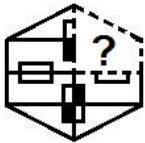


Ans

- ✓ 1.
- ✗ 2.
- ✗ 3.
- ✗ 4.

Question ID : 4244291795
Status : Answered
Chosen Option : 1

Q.25 Which of the following option figures will complete the pattern in the figure given below?



Ans

- ✗ 1.
- ✗ 2.
- ✓ 3.
- ✗ 4.

Question ID : 4244291796
Status : Answered
Chosen Option : 3

Q.1 The length of a rectangular plot is 15 m more than its breadth. If the cost of fencing the plot at the rate of ₹16.50 per m is ₹4,950, then what is the length of the plot (in m)?

- Ans** 1. 82.5
 2. 75
 3. 60
 4. 67.5

Question ID : 4244291818
Status : **Not Answered**
Chosen Option : --

Q.2 A man travelled the first part of his journey at 160 km/h and the second part at 240 km/h, and covered a total distance of 3840 km to his destination in 20 hours. How long, in hours, did the second part of his journey last?

- Ans** 1. 8
 2. 10
 3. 12
 4. 15

Question ID : 4244291817
Status : **Answered**
Chosen Option : 1

Q.3 The smallest number which when divided by 12, 10 and 11 leave remainders 11, 9 and 10, respectively, is:

- Ans** 1. 331
 2. 659
 3. 661
 4. 329

Question ID : 4244291805
Status : **Answered**
Chosen Option : 2

Q.4 A and B each borrowed equal sums for 3 years at a rate of 5% simple and compound interest compounded annually, respectively. At the time of payment, B had to pay ₹427 more than A. The sum borrowed and the interest paid by B (in ₹) were:

- Ans** 1. ₹56,000; ₹8,400
 2. ₹48,000; ₹7,200
 3. ₹48,000; ₹7,566
 4. ₹56,000; ₹8,827

Question ID : 4244291814
Status : **Answered**
Chosen Option : 1

Q.5 A vendor bought two varieties of tea, brand A and brand B, costing ₹15 per 100 g and ₹18 per 100 g, respectively, and mixed them in a certain ratio. Then, he sold the mixture at ₹20 per 100 g, making a profit of 20%. What was the ratio of brand A to brand B tea in the mixture?

- Ans**
- 1. 4 : 5
 - 2. 1 : 2
 - 3. 3 : 4
 - 4. 2 : 3

Question ID : 4244291813
Status : **Not Answered**
Chosen Option : --

Q.6 An open cuboidal cistern is externally 1.6 m long, 1.3 m wide and 53 cm high. Its capacity is 900 litres and its walls are 5 cm thick. The thickness (in cm) of the bottom is:

- Ans**
- 1. 4
 - 2. 3
 - 3. 5
 - 4. 2

Question ID : 4244291819
Status : **Not Answered**
Chosen Option : --

Q.7 A shopkeeper bought 1000 kg of rice, a part of which was sold at a 10% profit and the remaining at a 20% loss; a loss of 11% was incurred on the whole transaction. What was the quantity (in kg) of rice that was sold at a 20% loss?

- Ans**
- 1. 600
 - 2. 500
 - 3. 300
 - 4. 700

Question ID : 4244291812
Status : **Not Answered**
Chosen Option : --

Q.8 If A's income is 35% more than B's income, then by what percentage is B's income less than A's income (correct to the nearest integer)?

- Ans**
- 1. 26%
 - 2. 19%
 - 3. 35%
 - 4. 17%

Question ID : 4244291810
Status : **Answered**
Chosen Option : 3

Q.9 A tank full of petrol in a motorcycle lasts for 30 days. If a rider starts using 20% more petrol every day, then for how many days will the tank full of petrol last?

- Ans** 1. 25
 2. 18
 3. 10
 4. 20

Question ID : 4244291811
Status : Answered
Chosen Option : 1

Q.10 A can do a piece of work in 45 days. He works for 30 days and leaves. If B completes the remaining work in 5 days, then in how many days can B alone complete the entire work?

- Ans** 1. 10
 2. 15
 3. 18
 4. 12

Question ID : 4244291816
Status : Answered
Chosen Option : 2

Q.11 2 years ago, the average age of a family of 5 members was 18 years. After a new member is added to the family, the average age of the family is still the same. The present age of the newly added member, in years, is:

- Ans** 1. 8
 2. 6
 3. 10
 4. 5

Question ID : 4244291808
Status : Answered
Chosen Option : 1

Q.12 An amount of ₹43,892 is lent to each of two persons for 3 years. One at the rate of 30% simple interest and the other at the rate of 30% compound interest, compounded annually. By what percentage will the simple interest be less than the compound interest received in this 3-year duration (correct to one decimal place)?

- Ans** 1. 24.8%
 2. 23.8%
 3. 22.7%
 4. 25.7%

Question ID : 4244291815
Status : Not Answered
Chosen Option : --

Q.13 The sum of two numbers is 26 and their difference is 14. If three times the larger number is divided by the smaller number, then the quotient is:

- Ans
- 1. 11
 - 2. 12
 - 3. 10
 - 4. 9

Question ID : 4244291806
Status : Answered
Chosen Option : 3

Q.14 The marked Price of an article is ₹5000. Three successive discounts of 15%, 10% and 18%, are given on its marked price. The selling price (in ₹) of the article is:

- Ans
- 1. 3136.5
 - 2. 3250
 - 3. 3000
 - 4. 3362.75

Question ID : 4244291809
Status : Answered
Chosen Option : 1

Q.15 Which of the following fractions is the smallest?

$$\frac{11}{12}, \frac{13}{14}, \frac{12}{13}, \frac{15}{16}, \frac{19}{20}$$

- Ans
- 1. $\frac{13}{14}$
 - 2. $\frac{15}{16}$
 - 3. $\frac{19}{20}$
 - 4. $\frac{11}{12}$

Question ID : 4244291807
Status : Not Answered
Chosen Option : --

Q.1 Which of the following displays both the name of the application and the name of the spreadsheet in MS-Excel?

- Ans
- 1. Title bar
 - 2. Tool bar
 - 3. Task bar
 - 4. Menu bar

Question ID : 4244291820
Status : Not Answered
Chosen Option : --

Q.2 Which of the following is FALSE with reference to cell editing in MS-Excel?

- Ans
- 1. Select the cell, click on the formula bar and edit the content
 - 2. Edit the cell by double clicking the cell where the content is located
 - 3. Select the cell and press the F2 function key on the keyboard to edit the content of the cell
 - 4. Select the cell and press the F5 function key on the keyboard to edit the content of the cell

Question ID : 4244291821
Status : Not Answered
Chosen Option : --

Q.3 Which of the following can be used to change the width of the columns in a table in MS-Word?

- Ans
- 1. Insert
 - 2. Translate
 - 3. Define
 - 4. Table properties

Question ID : 4244291824
Status : Answered
Chosen Option : 4

Q.4 Which of the following is the full form of 'CC', a field of E-mail header?

- Ans
- 1. Continuous copy
 - 2. Carbon copy
 - 3. Character copy
 - 4. Control copy

Question ID : 4244291827
Status : Not Answered
Chosen Option : --

Q.5 Which of the following shortcuts is used to select a sentence in a paragraph in MS-Word?

- Ans
- 1. Alt+click on a sentence to select it
 - 2. Triple-click on a sentence to select it
 - 3. Ctrl+click on a sentence to select it
 - 4. Double-click on a sentence to select it

Question ID : 4244291826
Status : Answered
Chosen Option : 3

Q.6 Which of the following is NOT a feature of internet?

- Ans
- 1. Flexibility of communication
 - 2. Accessibility
 - 3. High cost
 - 4. Ease of use

Question ID : 4244291828
Status : Answered
Chosen Option : 3

Q.7 The 'LEN' function in MS-Excel belongs to which of the following categories?

- Ans
- 1. Financial
 - 2. Logical
 - 3. Text
 - 4. Math & Trig

Question ID : 4244291822
Status : Not Answered
Chosen Option : --

Q.8 Under which of the following menu tabs are Page Setup options usually available in MS-Word 2007?

- Ans
- 1. Insert
 - 2. Page Layout
 - 3. Home
 - 4. Review

Question ID : 4244291823
Status : Answered
Chosen Option : 2

Q.9 Which of the following is NOT a search engine?

- Ans
- 1. Bing
 - 2. Ask
 - 3. Yahoo
 - 4. Safari

Question ID : 4244291829
Status : Answered
Chosen Option : 2

Q.10 Which of the following is NOT a character formatting option in Ms-Word?

- Ans
- 1. Font style
 - 2. Font
 - 3. Size
 - 4. Alignment

Question ID : 4244291825
Status : Answered
Chosen Option : 4