

SSCCPOOct03,2023Shift2QuestionPaper

Roll Number	
Candidate Name	
VenueName	
Exam Date	03/10/2023
Exam Time	12:30 PM - 2:30 PM
Subject	SICPO Paper I 2023

Section:GeneralIntelligenceandReasoning

Q.1Whichofthefollowingnumberswillreplacethequestionmark(?)inthegivenseries? 91, 111, 133, ?, 183, 211

- Ans
- 1. 149
 - 2. 156
 - 3. 167
 - 4. 157

QuestionID:26433067631

Option1ID:264330265039

Option2ID:264330265037

Option3ID:264330265036

Option4ID:264330265038

Status:Answered

ChosenOption: 4

Three Statements are given followed by Three conclusions numbered I, II and III. Assuming the statements to be true, even if they seem to be at variance with commonly known facts, decidewhichoftheconclusionslogicallyfollow(s)fromthe statements.

Statements:
Allvalleysaremountains.
No sea is a mountain.
Someplainsareseas.

Conclusions:
I. Somevalleysareplains.
II. Noplainisamountain.
III. Noseaisavalley.

- Ans
- 1. OnlyconclusionIifollows.
 - 2. OnlyconclusionIIifollows.
 - 3. OnlyconclusionIifollows.
 - 4. BothconclusionslandIIfollow.

QuestionID:264330145341

Option1ID:264330569621

Option2ID:264330569620

Option3ID:264330569622

Option4ID:264330569619

Status:Answered

ChosenOption: 2

Q.3 Select the set in which the numbers are related in the same way as are the numbers of the following set.

(NOTE : Operations should be performed on the whole numbers, without breaking down the numbers into its constituent digits. E.g. 13 – Operations on 13 such as adding/subtracting/multiplying etc. to 13 can be performed. Breaking down 13 into 1 and 3 and then performing mathematical operations on 1 and 3 is NOT allowed)

(25,3,150)
(13,7,182)

- Ans 1. (5,8,184)
 2. (6,13,234)
 3. (10,5,100)
 4. (3,4,45)

QuestionID:264330145327

Option1ID:264330569564

Option2ID:264330569566

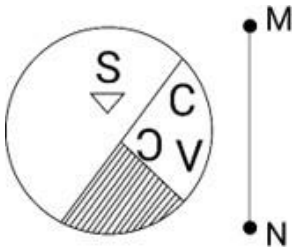
Option3ID:264330569565

Option4ID:264330569563

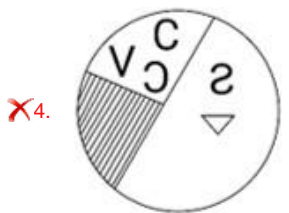
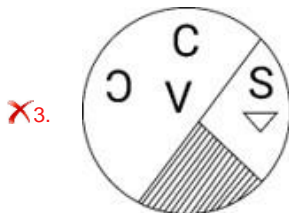
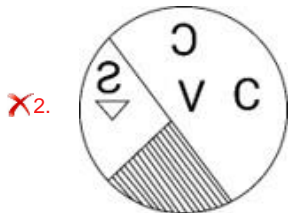
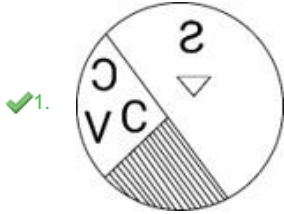
Status: Answered

ChosenOption: 3

Q.4 Select the correct mirror image of the given figure, when the mirror is placed at line MN as shown.



Ans



QuestionID:264330170163

Option1ID:264330667329

Option2ID:264330667328

Option3ID:264330667327

Option4ID:264330667330

Status: Answered

ChosenOption: 1

Q.5 In a certain code language, 'COUNTY' is written as 'ULCYGN' and 'FOREST' is written as 'RLFTHE'. How will 'MARGIN' be written in that language?

- Ans
- 1. RJMDSZ
 - 2. ZMTPRH
 - 3. ZMMRGI
 - 4. RZMNRG

QuestionID:26433074765

Option1ID:264330293149

Option2ID:264330293150

Option3ID:264330293151

Option4ID:264330293148

Status: **Not Attempted and Marked For Review**

ChosenOption:--

Q.6 Six students Meera, Jigyasa, Tarun, Naina, Shambhavi and Avni are sitting around a circular table facing the centre (not necessarily in the same order). Shambhavi is an immediate neighbour of both Jigyasa and Avni. Tarun is sitting third to the left of Jigyasa. Meera is sitting second to the right of Avni. Who is sitting third to the right of Meera?

- Ans
- 1. Avni
 - 2. Naina
 - 3. Jigyasa
 - 4. Shambhavi

QuestionID:26433082280

Option1ID:264330322953

Option2ID:264330322956

Option3ID:264330322955

Option4ID:264330322954

Status: **Not Attempted and Marked For Review**

ChosenOption:--

Q.7 Shilpa goes to a park every day for walking. One morning, she started walking from her home and walked 40 km towards the north. Then she turned to the right and walked 60 km. Again, she turned right and walked 40 km. Lastly, she took a left turn and walked 30 km. How far is she from her home?

- Ans
- 1. 140 km
 - 2. 90 km
 - 3. 100 km
 - 4. 60 km

QuestionID:26433097222

Option1ID:264330381588

Option2ID:264330381587

Option3ID:264330381585

Option4ID:264330381586

Status: **Answered**

ChosenOption: 2

Q.8 Which two mathematical signs should be interchanged to make the given equation correct?

$$(75+15) \times 27 \times 1 - 9 \div 7 \times (135+3) - 10 \div (189+63) = 434$$

- Ans
- 1. + and ÷
 - 2. + and -
 - 3. × and +
 - 4. ÷ and -

QuestionID:264330145311

Option1ID:264330569501

Option2ID:264330569500

Option3ID:264330569499

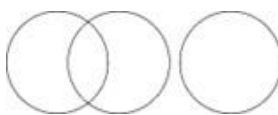


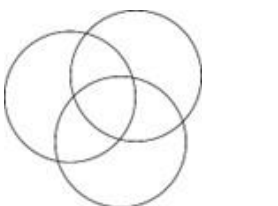
Option4ID:264330569502

Status: **Not Attempted and Marked For Review**

ChosenOption:--

Q.9 Select the Venn diagram that best illustrates the relationship between the following classes.
Animals, Cats, Dogs

Ans

- 1. 
- 2. 
- 3. 
- 4. 

QuestionID:264330132028

Option1ID:264330517210

Option2ID:264330517208

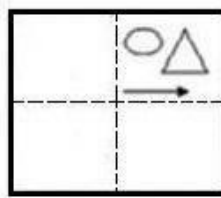
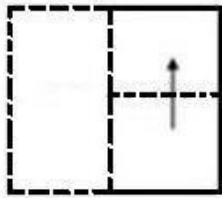
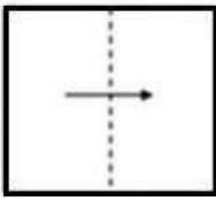
Option3ID:264330517209

Option4ID:264330517207

Status: **Answered**

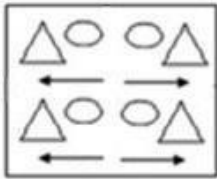
ChosenOption: 4

Q.10 A paper is folded and cut as shown below. How will it appear when unfolded?

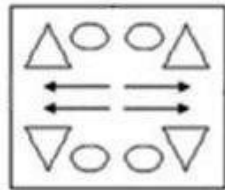


Ans

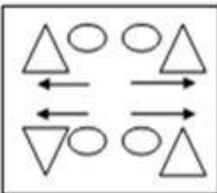
X1.



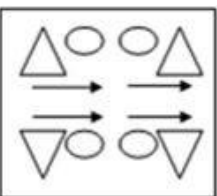
✓2.



X3.



X4.



QuestionID:26433091687

Option1ID:264330360114

Option2ID:264330360113

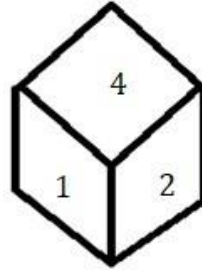
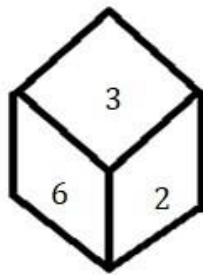
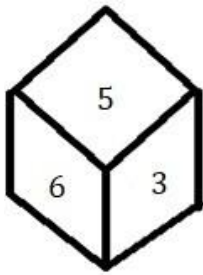
Option3ID:264330360116

Option4ID:264330360115

Status: Answered

ChosenOption: 2

Q.11 Three different positions of the same dice are shown. Find the number on the face opposite the face showing '5'.



Ans 1. 2

2. 3

3. 4

4. 1

QuestionID:264330108970

Option1ID:264330428158

Option2ID:264330428159

Option3ID:264330428160

Option4ID:264330428157

Status: Answered

ChosenOption: 1

Q.12 In a certain code language, 'DOING' is written as 'BQTOV' and 'ZEBRA' is written as 'FAAKB'. How will 'STORM' be written in that language?

Ans 1. PETBK

2. MKYTS

3. PRYSK

4. MLNKP

QuestionID:26433074759

Option1ID:264330293127

Option2ID:264330293125

Option3ID:264330293124

Option4ID:264330293126

Status: Not Attempted and Marked For Review

ChosenOption:--

Q.13 Two statements are given followed by two conclusions numbered I and II. Assuming the statements to be true, even if they seem to be at variance with commonly known facts, decide which of the conclusions logically follow(s) from the statements. Statements:

Someshells are pebbles.

All pebbles are rocks.

Conclusions:

I. No shell is a rock.

II. Someshells are rocks.

Ans 1. Only conclusion I follows

2. Neither conclusion I nor II follows

3. Both conclusions I and II follow

4. Only conclusion II follows

QuestionID:26433058040

Option1ID:264330227144

Option2ID:264330227147

Option3ID:264330227146

Option4ID:264330227145

Status: Answered

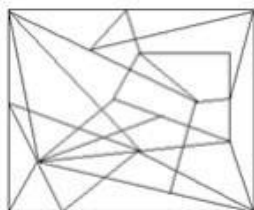
ChosenOption: 4

Q.14 Select the option figure in which the given figure is embedded (rotation is NOT allowed).

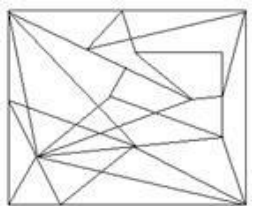


Ans

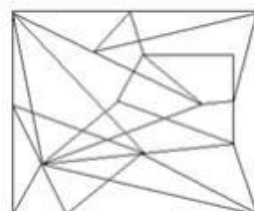
X1.



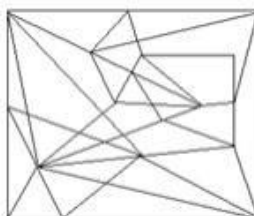
X2.



✓3.



X4.



QuestionID:264330145475

Option1ID:264330570156

Option2ID:264330570155

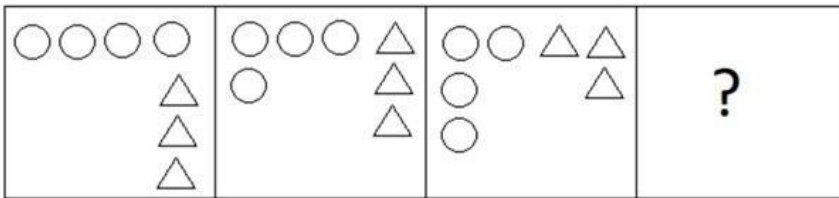
Option3ID:264330570157

Option4ID:264330570158

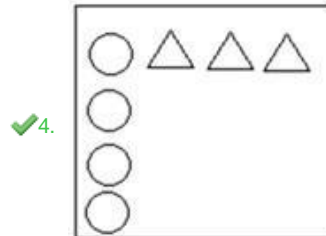
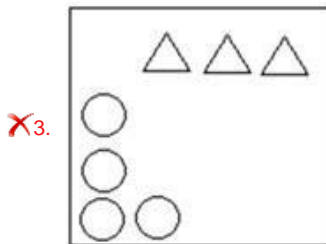
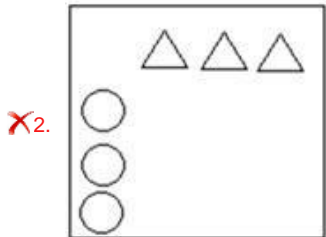
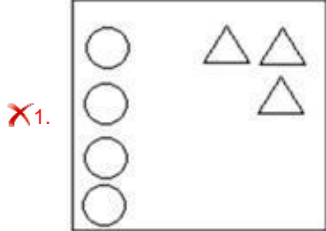
Status: Not Attempted and
Marked For Review

ChosenOption:--

Q.15 Select the figure that will come next in the following figure series.



Ans



QuestionID:26433087072

Option1ID:264330341931

Option2ID:264330341930

Option3ID:264330341929

Option4ID:264330341932

Status:Answered

ChosenOption: 4

Q.16 Select the correct option that indicates the arrangement of the given words in the order in which they appear in an English dictionary.

1. Formal
2. Foreign
3. Forest
4. Forgotten
5. Forge
6. Forlorn

Ans 1.2,3,5,4,6,1

2.2,3,6,1,5,4

3.2,3,4,5,6,1

4.2,3,5,6,4,1

QuestionID:264330145376

Option1ID:264330569760

Option2ID:264330569762

Option3ID:264330569759

Option4ID:264330569761

Status:Answered

ChosenOption: 3

Q.17 If A denotes '+', B denotes 'x', C denotes '-', and D denotes '÷', then what will be the value of the following equation?
 $13B7A64D4C23=?$

Ans 1. 82

2. 84

3. 86

4. 76

QuestionID:264330129784

Option1ID:264330508367

Option2ID:264330508369

Option3ID:264330508368

Option4ID:264330508370

Status:Answered

ChosenOption: 2

Q.18 Select the option that represents the letters which, when sequentially placed from left to right in the blanks below, will complete the letter series.

A _ D F _ K _ F A _ L _ Ans

1. D L K L F A L D

2. L A L K D F D K

3. K L A L D K D F

4. F D L A K F D L

QuestionID:26433086951

Option1ID:264330341445

Option2ID:264330341447

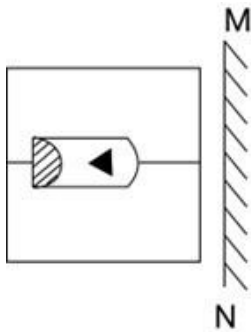
Option3ID:264330341446

Option4ID:264330341448

Status:Answered

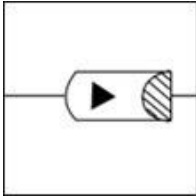
ChosenOption: 3

Q.19 Select the correct mirror image of the given combination when the mirror is placed at 'MN' as shown below.

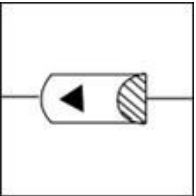


Ans

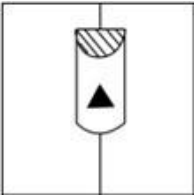
✓ 1.



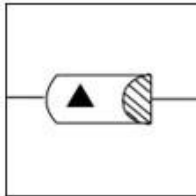
✗ 2.



✗ 3.



✗ 4.



QuestionID:264330130773

Option1ID:264330512204

Option2ID:264330512205

Option3ID:264330512203

Option4ID:264330512206

Status:Answered

ChosenOption: 1

Q.20 Town Q is to the north of Town P. Town R is to the west of Town Q. Town S is to the north of Town R. Town T is to the east of Town S. What is the position of Town T with respect to Town R? (All positions are arranged in GRID pattern).

Ans ✗ 1. East

✗ 2. South

✓ 3. North-east

✗ 4. South-east

QuestionID:26433091638

Option1ID:264330359919

Option2ID:264330359918

Option3ID:264330359917

Option4ID:264330359920

Status:Answered

ChosenOption: 4

Q.21 In a certain code language, 'FRIGHT' is written as 'FOCQED' and 'SHREDS' is written as 'OEPPAB'. How will 'UPSETS' be written in that language?

- Ans
- 1. PMRSQB
 - 2. PMROQB
 - 3. PMRPQB
 - 4. PMSPQB

QuestionID:264330180764

Option1ID:264330709026

Option2ID:264330709023

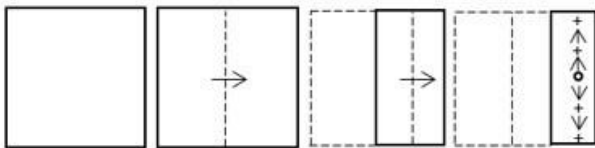
Option3ID:264330709025

Option4ID:264330709024

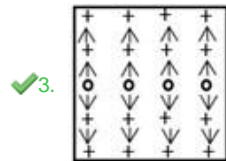
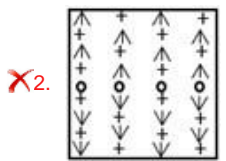
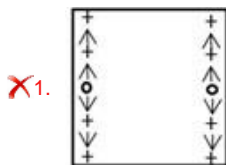
Status: Answered

ChosenOption: 4

Q.22 A paper is folded and cut as shown. How will it appear when unfolded?



Ans



QuestionID:26433068428

Option1ID:264330268224

Option2ID:264330268227

Option3ID:264330268225

Option4ID:264330268226

Status: Not Attempted and Marked For Review

ChosenOption: --

Q.23 Select the set in which the numbers are related in the same way as are the numbers of the following sets.

(NOTE : Operations should be performed on the whole numbers, without breaking down the numbers into its constituent digits. E.g. 13 – Operations on 13 such as adding/subtracting/multiplying etc. to 13 can be performed. Breaking down 13 into 1 and 3 and then performing mathematical operations on 1 and 3 is NOT allowed)

(11,33,17),(18,44,21)

- Ans
- 1. (7, 32, 9)
 - 2. (12, 40, 18)
 - 3. (16, 43, 22)
 - 4. (15, 34, 19)

QuestionID:264330145304
Option1ID:264330569473
Option2ID:264330569474
Option3ID:264330569471
Option4ID:264330569472
Status:Answered
ChosenOption: 3

Q.24 Which of the following numbers will replace the question mark (?) in the given series?

90,110,132,?,182

- Ans
- 1. 156
 - 2. 169
 - 3. 148
 - 4. 146

QuestionID:264330145335
Option1ID:264330569598
Option2ID:264330569597
Option3ID:264330569595
Option4ID:264330569596
Status:Answered
ChosenOption: 1

Q.25 Select the set in which the numbers are related in the same way as are the numbers of the following sets.

(NOTE : Operations should be performed on the whole numbers, without breaking down the numbers into its constituent digits. E.g. 13 – Operations on 13 such as adding/subtracting/multiplying etc. to 13 can be performed. Breaking down 13 into 1 and 3 and then performing mathematical operations on 1 and 3 is NOT allowed)

(13,104,16),(9,63,14)

- Ans
- 1. (23, 204, 26)
 - 2. (8, 60, 15)
 - 3. (12, 85, 15)
 - 4. (10, 92, 17)

QuestionID:264330145299
Option1ID:264330569451
Option2ID:264330569453
Option3ID:264330569454
Option4ID:264330569452
Status: Not Attempted and Marked For Review
ChosenOption:--

Q.26 Which of the following numbers will replace the question mark (?) in the given series? 18, 27, 31, 43, 44, 59, 57, ?

- Ans
- 1. 82
 - 2. 74
 - 3. 83
 - 4. 75

QuestionID:26433067869
Option1ID:264330265989
Option2ID:264330265990
Option3ID:264330265991
Option4ID:264330265988
Status:Answered
ChosenOption: 4

Q.27 Which letter-cluster will complete the given series?
BHERZ, DGHTX, FFKVV, _____

- Ans
- 1. HENWT
 - 2. GGNXU
 - 3. HGMWU
 - 4. HENXT

QuestionID:264330106616
Option1ID:264330418766
Option2ID:264330418768
Option3ID:264330418765
Option4ID:264330418767
Status: Not Attempted and Marked For Review
ChosenOption:--

Q.28 Select the option that is related to the third word in the same way as the second word is related to the first word. (The words must be considered as meaningful words and must not be related to each other based on the number of letters/number of consonants/vowels in the word.)
Nun:Convent::King:?

- Ans
- 1. Palace
 - 2. Cottage
 - 3. Prison
 - 4. Monastery

QuestionID:26433091603
Option1ID:264330359778
Option2ID:264330359777
Option3ID:264330359780
Option4ID:264330359779
Status:Answered
ChosenOption: 1

Q.29 Select the option that represents the correct order of the given words as they would appear in an English dictionary?

1. Authority
2. Automate
3. Authentic
4. Auspicious
5. Aureole

Ans 1. 4,5,3,1,2
 2. 5,3,4,1,2
 3. 5,4,3,1,2
 4. 3,4,5,1,2

QuestionID:26433067246

Option1ID:264330263499

Option2ID:264330263497

Option3ID:264330263498

Option4ID:264330263496

Status: Answered

ChosenOption: 3

Q.30 Seven friends, A, B, C, D, E, F and G, are sitting around a circular table facing the centre (not necessarily in the same order). D is an immediate neighbour of B and C. A is sitting third to the right of C. E is an immediate neighbour of A and F. G is sitting immediate left of C. B is sitting third to the right of G. What is the position of G with respect to A when counted from the right side of A?

Ans 1. Third to the right
 2. Second to the right
 3. Third to the left
 4. Second to the left

QuestionID:26433056907

Option1ID:264330222613

Option2ID:264330222614

Option3ID:264330222612

Option4ID:264330222615

Status: Not Attempted and Marked For Review

ChosenOption:--

Q.31 Four letter-clusters have been given, out of which three are alike in some manner and one is different. Select the odd letter-cluster.

Ans 1. KNJZ
 2. FIEU
 3. MJLO
 4. SVRH

QuestionID:264330180753

Option1ID:264330708981

Option2ID:264330708979

Option3ID:264330708980

Option4ID:264330708982

Status: Not Attempted and Marked For Review

ChosenOption:--

Q.32 Three of the following letter-clusters are alike in some manner and one is different. Select the one that is different.

- Ans 1. MRVY
 2. GLPS
 3. NSWZ
 4. TGQJ

QuestionID:264330145344

Option1ID:264330569631

Option2ID:264330569632

Option3ID:264330569634

Option4ID:264330569633

Status: **Not Attempted and Marked For Review**

ChosenOption:--

Q.33 Which two numbers (not digits) should be interchanged to make the given equation correct?

$$(18 \times 2) - 24 + 10 \times 160 \div 16 + (10 \times 4) = 170$$

- Ans 1. 2 and 24
 2. 2 and 4
 3. 24 and 18
 4. 16 and 18

QuestionID:264330145307

Option1ID:264330569486

Option2ID:264330569483

Option3ID:264330569485

Option4ID:264330569484

Status: **Answered**

ChosenOption: 3

Q.34 Select the set in which the numbers are related in the same way as are the numbers of the following sets.

(NOTE : Operations should be performed on the whole numbers, without breaking down the numbers into its constituent digits. E.g. 13- Operations on 13 such as adding/subtracting/multiplying etc. to 13 can be performed. Breaking down 13 into 1 and 3 and then performing mathematical operations on 1 and 3 is not allowed.)
(15, 21, 66)
(9, 17, 44)

- Ans 1. (2, 4, 12)
 2. (5, 37, 52)
 3. (7, 9, 86)
 4. (11, 13, 35)

QuestionID:26433057456

Option1ID:264330224809

Option2ID:264330224810

Option3ID:264330224808

Option4ID:264330224811

Status: **Not Attempted and Marked For Review**

ChosenOption:--

Q.35 Which two signs should be interchanged to make the given equation correct? 13 +
 $145 \div 29 \times 52 - 11 = 106$

Ans 1. - and x

2. x and +

3. ÷ and -

4. ÷ and +

QuestionID:264330129525

Option1ID:264330507469

Option2ID:264330507468

Option3ID:264330507466

Option4ID:264330507467

Status:Answered

ChosenOption: 2

Q.36 Which figure from the given options would replace the question mark (?) if the following figure series were to be continued?

R	3	A	□	9	R	3	F	☆	□	A	3	?
○	F	9	3	F	☆	S	○	A	F	○	9	
□	☆	S	S	○	A	□	9	R	R	S	☆	

Ans

✗1.

F	S	9
R	A	☆
□	○	3

✗2.

R	S	☆
□	A	3
F	○	9

✓3.

F	○	9
R	S	☆
□	A	3

✗4.

R	9	□
A	○	S
☆	F	3

QuestionID:264330145478

Option1ID:264330570170

Option2ID:264330570167

Option3ID:264330570168

Option4ID:264330570169

Status: **Not Attempted and Marked For Review**

ChosenOption:--

Q.37 If M denotes '-', N denotes '+', O denotes 'x', and P denotes '+', then what will come in place of '?' in the following equation?
255N5O4P16O3M29=?

Ans 1.223

2.216

3.211

4.230

QuestionID:26433057631

Option1ID:264330225508

Option2ID:264330225509

Option3ID:264330225511

Option4ID:264330225510

Status:Answered

ChosenOption: 1

Q.38 PRO5 is related to OSQ15 in a certain way. In the same way, OPO10 is related to 'NQQ 30'.
Which of the following is related to 'MAC 9' using the same logic?

Ans 1. NZA3

2. OZA3

3. NZB3

4. NZA 27

QuestionID:264330145384

Option1ID:264330569792

Option2ID:264330569791

Option3ID:264330569794

Option4ID:264330569793

Status:Answered

ChosenOption: 4

Q.39 'M\$K' means 'M is the mother of K'. 'M # K' means 'M is the father of K'.
'M @ K' means 'M is the husband of K'.
'M% K' means 'M is the daughter of K'.
If A\$C @R, then how is R related to A?

Ans 1. Husband's father

2. Mother

3. Son's wife

4. Daughter

QuestionID:264330145391

Option1ID:264330569822

Option2ID:264330569821

Option3ID:264330569819

Option4ID:264330569820

Status:Answered

ChosenOption: 3

Q.40 If '+' means 'divided by', '÷' means 'added to', 'x' means 'subtracted from' and '-' means 'multiplied by', then what will be the value of the following expression?

$$[(25 \times 13) - (3 \div 3)] + (3 - 4) \div 5$$

- Ans
- 1. 20
 - 2. 10
 - 3. 15
 - 4. 5

QuestionID:264330130377

Option1ID:264330510622

Option2ID:264330510620

Option3ID:264330510621

Option4ID:264330510619

Status: **Not Attempted and Marked For Review**

ChosenOption:--

Q.41 Which of the following numbers will replace the question mark (?) and complete the given number series?
15, 19, 21, 25, 27, ?

- Ans
- 1. 31
 - 2. 32
 - 3. 29
 - 4. 30

QuestionID:26433067479

Option1ID:264330264429

Option2ID:264330264431

Option3ID:264330264430

Option4ID:264330264428

Status: **Answered**

ChosenOption: 1

Q.42 Which letter-cluster will replace the question mark (?) to complete the given series? MMNO, OKPM, ?, SGTI, UEVG

- Ans
- 1. POKI
 - 2. QRIL
 - 3. QIRK
 - 4. PQIJ

QuestionID:264330180763

Option1ID:264330709022

Option2ID:264330709020

Option3ID:264330709021

Option4ID:264330709019

Status: **Not Attempted and Marked For Review**

ChosenOption:--

Q.43 In a certain code language, 'OIL' is coded as 27 and 'CREAM' is coded as 125. How will 'POWDER' be coded in the same language?

- Ans 1. 225
 2. 216
 3. 198
 4. 169

QuestionID:264330132210

Option1ID:264330517938

Option2ID:264330517937

Option3ID:264330517936

Option4ID:264330517935

Status: **Not Attempted and Marked For Review**

ChosenOption:--

Q.44 Given below are two statements and two conclusions. Take the statements to be true even if they are at variance with commonly known facts, and decide whether the conclusion(s) follow(s) the given statements.

Statements:

Some cakes are biscuits.

Some biscuits are chocolates.

Conclusions:

I. Some biscuits are cakes.

II. Some cakes are chocolates.

- Ans 1. Both the conclusions follow
 2. Only conclusion II follows
 3. Neither conclusion I nor II follows
 4. Only conclusion I follows

QuestionID:26433056639

Option1ID:264330221542

Option2ID:264330221541

Option3ID:264330221543

Option4ID:264330221540

Status: **Answered**

ChosenOption: 1

Q.45 If I denotes '+', J denotes 'x', K denotes '-' and L denotes '+', then what will come in place of '?' in the following equation?

$$(35I5)J9K23L39K(3J8)=?$$

- Ans 1. 60
 2. 59
 3. 51
 4. 55

QuestionID:264330145339

Option1ID:264330569612

Option2ID:264330569614

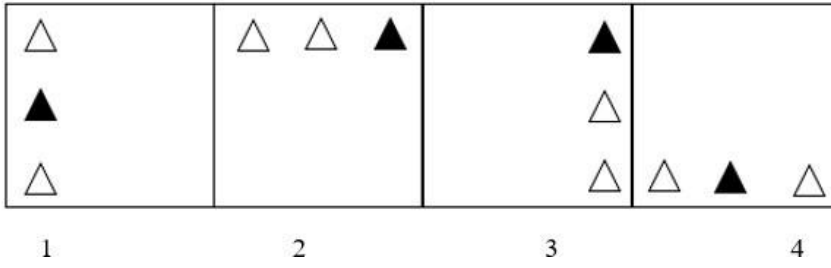
Option3ID:264330569613

Option4ID:264330569611

Status: **Answered**

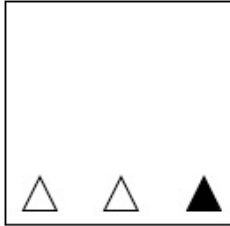
ChosenOption: 4

Q.46 Which of the given figures when placed in the 5th position would continue the series that is established by the first four figures?

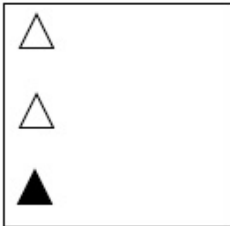


Ans

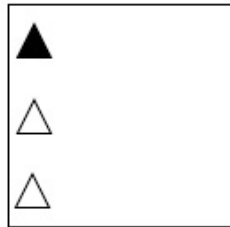
✗1.



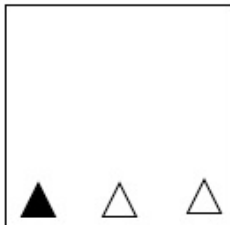
✗2.



✓3.



✗4.



QuestionID:26433087307

Option1ID:264330342867

Option2ID:264330342866

Option3ID:264330342865

Option4ID:264330342868

Status: **Not Attempted and
Marked For Review**

ChosenOption:--

Q.47A@Bmeans'AisthehusbandofB' A &
 B means 'A is the mother of B'
 A#Bmeans'AisthedughterofB'
 IfQ@M&Y@J#R&Z,thenhowisYrelatedto Z?

- Ans
- 1. Brother's wife
 - 2. Father'ssister
 - 3. Sister'sshusband
 - 4. Father

QuestionID:264330126024

Option1ID:264330493768

Option2ID:264330493769

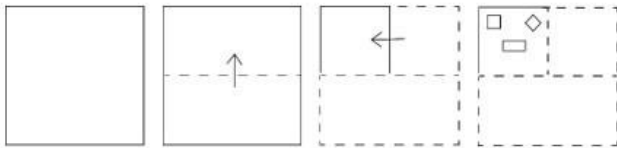
Option3ID:264330493771

Option4ID:264330493770

Status: **NotAttemptedand
MarkedForReview**

ChosenOption:--

Q.48 A paper is folded and cut as shown below. How will it appear when unfolded?



Ans

- 1.
- 2.
- 3.
- 4.

QuestionID:264330103002

Option1ID:264330404399

Option2ID:264330404398

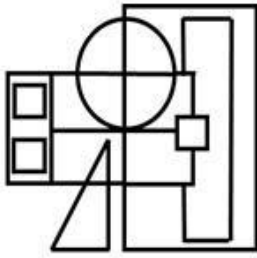
Option3ID:264330404397

Option4ID:264330404400

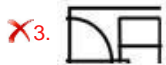
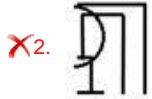
Status: **NotAttemptedand
MarkedForReview**

ChosenOption:--

Q.49 Select the option figure which is embedded in the given figure as its part (rotation is NOT allowed).



Ans



QuestionID:264330145465

Option1ID:264330570117

Option2ID:264330570118

Option3ID:264330570116

Option4ID:264330570115

Status: **Not Attempted and Marked For Review**

ChosenOption:--

Q.50 In a certain code language, 'HIGHLY' is written as 'GRHYOH' and 'CLEVER' is written as 'EOCRVV'. How will 'HORROR' be written in that language?

Ans X1. JRLPDB

✓2. RLHRLR

X3. JPRDER

X4. RKJPED

QuestionID:26433074763

Option1ID:264330293142

Option2ID:264330293141

Option3ID:264330293143

Option4ID:264330293140

Status: **Not Answered**

ChosenOption:--

In India, which of the following modes of transportation reduce trans-shipment losses and delays in supply of petroleum and gas?

- Ans 1. Pipeline
 2. Roadways
 3. Railways
 4. Waterways

QuestionID:264330132720
Option1ID:264330519978
Option2ID:264330519977
Option3ID:264330519975
Option4ID:264330519976
Status:Answered
ChosenOption: 1

From which country has the concept of Martial Law, which restricts Fundamental rights, borrowed?

- Ans 1. The UK
 2. The USSR
 3. China
 4. Japan

QuestionID:264330113392
Option1ID:264330445654
Option2ID:264330445656
Option3ID:264330445655
Option4ID:264330445653
Status:Answered
ChosenOption: 4

Copacabana beach is situated in _____.

- Ans 1. Peru
 2. Australia
 3. Mexico
 4. Brazil

QuestionID:26433054947
Option1ID:264330214774
Option2ID:264330214772
Option3ID:264330214775
Option4ID:264330214773
Status: Not Attempted and Marked For Review
ChosenOption:--

Q.4 Which of the following is the most widely used method for refining impure metals? Ans

1. Vapour-Phase Refining
 2. Poling Refining
 3. Electrolytic Refining
 4. Liquidation Refining

QuestionID:264330131684
Option1ID:264330515835
Option2ID:264330515838
Option3ID:264330515836
Option4ID:264330515837
Status:Answered
ChosenOption: 3

Q.5 Which of the following is the correct statement? Ans

- 1. Joule is the unit of work
- 2. The unit of energy is the watt.
- 3. Joule/second is also a unit of energy.
- 4. The unit of power is joule/newton.

QuestionID:264330111860
Option1ID:264330439527
Option2ID:264330439526
Option3ID:264330439528
Option4ID:264330439525
Status:Answered
ChosenOption: 1

Q.6 Which of the following microfinance institutions was established in India at the time of independence?

- Ans
- 1. Joint Liability Group
 - 2. Rural Cooperatives
 - 3. Self Help Group
 - 4. Grameen Model Bank

QuestionID:264330145234
Option1ID:264330569192
Option2ID:264330569191
Option3ID:264330569193
Option4ID:264330569194
Status:Not Attempted and Marked For Review
ChosenOption:--

Q.7 'The Race of my Life' is the autobiography of which of the following sportsmen? Ans

- 1. PT Usha
- 2. Mary Kom
- 3. Milkha Singh
- 4. Saurav Ganguly

QuestionID:26433071672
Option1ID:264330281115
Option2ID:264330281114
Option3ID:264330281113
Option4ID:264330281112
Status:Answered
ChosenOption: 3

Q.8 Which of the following has been INCORRECTLY listed as a condition for becoming a citizen of India?

- Ans
- 1. Citizenship by birth
 - 2. Citizenship by naturalisation
 - 3. Citizenship through acquisition of property
 - 4. Citizenship by descent

QuestionID:264330130475
Option1ID:264330511011
Option2ID:264330511014
Option3ID:264330511013
Option4ID:264330511012
Status:Answered
ChosenOption: 3

Q.9 Which British scientist is known for developing the principle of holography in 1947 to improve the resolution of the electron microscope?

- Ans
- 1. Werner Heisenberg
 - 2. Lloyd Cross
 - 3. Dennis Gabor
 - 4. Charles Towns

QuestionID:264330141668
Option1ID:264330554994
Option2ID:264330554993
Option3ID:264330554992
Option4ID:264330554991
Status:Answered
ChosenOption: 3

Q.10 The 'Tripartite struggle' was between Gurjara Pratihara in North India, Palas in Eastern India and _____ in South India.

- Ans
- 1. Marathas
 - 2. Rashtrakutas
 - 3. Cholas
 - 4. Cheras

QuestionID:264330165356
Option1ID:264330648506
Option2ID:264330648505
Option3ID:264330648504
Option4ID:264330648503
Status:Answered
ChosenOption: 2

Q.11 Who is the author of the novel 'The Moor's Last Sigh'? Ans

- 1. VS Naipaul
- 2. John Keay
- 3. Kiran Doshi
- 4. Salman Rushdie

QuestionID:264330145174
Option1ID:264330568951
Option2ID:264330568953
Option3ID:264330568954
Option4ID:264330568952
Status:Answered
ChosenOption: 4

Q.12 Which of the following dances is based on Rasleelathemes of Radha and Krishna? Ans

- 1. Manipuri dance
- 2. Sattriyadance
- 3. Mohiniyattam
- 4. Kathak

QuestionID:264330164790
Option1ID:264330646287
Option2ID:264330646289
Option3ID:264330646290
Option4ID:264330646288
Status:Answered
ChosenOption: 3

Q.13 Who among the following was the last Mauryan ruler and was killed by his commander-in-chief?

- Ans 1. Shatadhanvan
 2. Bindusara
 3. Brihadratha
 4. Dashratha

QuestionID:264330165558

Option1ID:264330649314

Option2ID:264330649312

Option3ID:264330649313

Option4ID:264330649311

Status: **Not Attempted and Marked For Review**

ChosenOption:--

Q.14 Which writ is issued when the court finds that there is unlawful arrest of a person? Ans

1. Prohibition
 2. Mandamus
 3. Quowarranto
 4. Habeas corpus

QuestionID:264330116397

Option1ID:264330457675

Option2ID:264330457674

Option3ID:264330457676

Option4ID:264330457673

Status: **Answered**

ChosenOption: 4

Q.15 Who among the following founded an expatriate Communist Party of India at Tashkent in 1920?

- Ans 1. PC Joshi
 2. Shripad Amrut Dange
 3. Jolly Kaul
 4. MN Roy

QuestionID:264330106615

Option1ID:264330418762

Option2ID:264330418761

Option3ID:264330418763

Option4ID:264330418764

Status: **Answered**

ChosenOption: 4

Q.16 Which of the following statements is incorrect?

- Ans
- 1. The transport of male gametes in Gymnosperms occurs through water.
 - 2. The transport of male gametes in bryophytes and pteridophytes occurs through water.
 - 3. The transport of male gametes in bryophytes and pteridophytes occurs through air.
 - 4. The transport of male gametes in angiosperms occurs through water.

QuestionID:26433089668

Option1ID:264330352173

Option2ID:264330352176

Option3ID:264330352175

Option4ID:264330352174

Status: **Not Attempted and Marked For Review**

ChosenOption:--

Q.17 Which Union Territory recorded the highest male literacy rate, according to the 2011 Census?

- Ans
- 1. Daman and Diu
 - 2. Delhi
 - 3. Andaman and Nicobar Islands
 - 4. Lakshadweep

QuestionID:264330110659

Option1ID:264330434916

Option2ID:264330434913

Option3ID:264330434915

Option4ID:264330434914

Status: **Answered**

ChosenOption: 2

Q.18 Pandit Ravi Shankar popularised which instrument in particular all over the world? Ans

- 1. Sitar
- 2. Tabla
- 3. Veena
- 4. Harmonium

QuestionID:26433074853

Option1ID:264330293503

Option2ID:264330293500

Option3ID:264330293501

Option4ID:264330293502

Status: **Answered**

ChosenOption: 1

Q.19 According to the Census of India 2011, which metropolitan city has the highest population?

- Ans 1. Mumbai
 2. Kolkata
 3. Chennai
 4. Patna

QuestionID:264330166806
Option1ID:264330654259
Option2ID:264330654261
Option3ID:264330654260
Option4ID:264330654262
Status:Answered
ChosenOption: 1

Q.20 Ker and Garia Puja are traditional tribal festivals of which state? Ans

1. Jharkhand
 2. Manipur
 3. Odisha
 4. Tripura

QuestionID:264330164806
Option1ID:264330646351
Option2ID:264330646354
Option3ID:264330646352
Option4ID:264330646353
Status: Not Attempted and Marked For Review
ChosenOption:--

Q.21 Which company has been given the responsibility of construction, operation and maintenance of the Hazira-Vijaipur-Jagdishpur (HVJ) pipeline project?

- Ans 1. TATA Petrodyne Limited (TPL)
 2. Oil and Natural Gas Corporation (ONGC)
 3. Gas Authority of India (GAIL)
 4. Reliance Industries Limited (RIL)

QuestionID:264330111326
Option1ID:264330437390
Option2ID:264330437389
Option3ID:264330437392
Option4ID:264330437391
Status: Not Attempted and Marked For Review
ChosenOption:--

Q.22 Mawsynram, the place that receives the highest rainfall in the world, is situated in which hills?

- Ans
- 1. Patkai Hills
 - 2. Mishmi Hills
 - 3. Rajmahal Hills
 - 4. Khasi Hills

QuestionID:264330119785
Option1ID:264330469418
Option2ID:264330469415
Option3ID:264330469416
Option4ID:264330469417
Status:Answered
ChosenOption: 4

Q.23 Which of the following organisations was founded in Poona, Satara and other towns of Maharashtra that worked against Brahmanical orthodoxy and tried to reform Hinduism?

- Ans
- 1. Brahma Samaj
 - 2. Paramahansa Mandali
 - 3. Ramakrishna Mission
 - 4. Arya Samaj

QuestionID:264330165399
Option1ID:264330648678
Option2ID:264330648675
Option3ID:264330648676
Option4ID:264330648677
Status:Answered
ChosenOption: 4

Q.24 In 1784, who discovered the composition of water through his experiment with hydrogen and oxygen?

- Ans
- 1. Henry Cavendish
 - 2. Herbert C Brown
 - 3. Joseph Priestley
 - 4. John Dalton

QuestionID:264330145222
Option1ID:264330569146
Option2ID:264330569143
Option3ID:264330569145
Option4ID:264330569144
Status:Answered
ChosenOption: 1

Q.25 Under which strata do trees fall? Ans

- s
- 1. Second vertical
 - 2. Top vertical
 - 3. Middle vertical
 - 4. Bottom vertical

QuestionID:264330145214

Option1ID:264330569112

Option2ID:264330569111

Option3ID:264330569113

Option4ID:264330569114

Status: Not Attempted and
Marked For Review

ChosenOption:--

Q.26 The fundamental duties were added in the Indian Constitution on the recommendation of the:

- Ans
- 1. Balwant Rai Mehta Committee
 - 2. Bibek Debroy Committee
 - 3. L M Singhvi Committee
 - 4. Sardar Swaran Singh Committee

QuestionID:264330111511

Option1ID:264330438129

Option2ID:264330438132

Option3ID:264330438131

Option4ID:264330438130

Status: Answered

ChosenOption: 4

Q.27 Which of the following is the correct formula for moment of inertia? Ans

- 1. $I = mr^2$
- 2. $I = rm^2$
- 3. $I = m/r^2$
- 4. $I = 2mr$

QuestionID:264330111862

Option1ID:264330439534

Option2ID:264330439536

Option3ID:264330439533

Option4ID:264330439535

Status: Answered

ChosenOption: 1

Q.28 Which of the following Articles of the Indian Constitution deals with the relationship between the Prime Minister and the President?

- Ans
- 1. Article 45
 - 2. Article 25
 - 3. Article 35
 - 4. Article 75

QuestionID:264330113416

Option1ID:264330445749

Option2ID:264330445751

Option3ID:264330445752

Option4ID:264330445750

Status: Answered

ChosenOption: 4

Q.29 India's rank in Tokyo Olympic 2020 is:

Ans 1. 49

2. 48

3. 47

4. 46

QuestionID:264330109684

Option1ID:264330431016

Option2ID:264330431015

Option3ID:264330431014

Option4ID:264330431013

Status: **Not Attempted and
Marked For Review**

ChosenOption:--

Q.30 In which of the following years was the Muslim League formed? Ans

1. 1915

2. 1909

3. 1906

4. 1912

QuestionID:264330112345

Option1ID:264330441465

Option2ID:264330441467

Option3ID:264330441468

Option4ID:264330441466

Status: **Answered**

ChosenOption: 2

Q.31 The Chambal, Hindon and Tons rivers are tributaries of the river:

Ans 1. Yamuna

2. Mahanadi

3. Kaveri

4. Tapi

QuestionID:264330169992

Option1ID:264330666643

Option2ID:264330666645

Option3ID:264330666644

Option4ID:264330666646

Status: **Not Attempted and
Marked For Review**

ChosenOption:--

Q.32 Prabhat Sarma, a recipient of Sangeet Natak Akademi Award, was a _____ player from Assam.

- Ans
- 1. Ghatam
 - 2. Flute
 - 3. Tabla
 - 4. sarangi

QuestionID:264330145158

Option1ID:264330568890

Option2ID:264330568887

Option3ID:264330568889

Option4ID:264330568888

Status: **Not Attempted and Marked For Review**

ChosenOption:--

Q.33 Mehrangarh fort is located in which of the following cities? Ans

- 1. Jaipur
- 2. Kota
- 3. Jodhpur
- 4. Bikaner

QuestionID:264330164850

Option1ID:264330646528

Option2ID:264330646529

Option3ID:264330646530

Option4ID:264330646527

Status: **Not Attempted and Marked For Review**

ChosenOption:--

Q.34 During a game of hockey, following an offence, if a player is shown a yellow card then he will be sent off the pitch for _____.

- Ans
- 1. 5 minutes
 - 2. 6 minutes
 - 3. 4 minutes
 - 4. 3 minutes

QuestionID:264330109854

Option1ID:264330431695

Option2ID:264330431696

Option3ID:264330431694

Option4ID:264330431693

Status: **Answered**

ChosenOption: 1

Q.35 Trade liberalisation has helped India improve its _____ industries with medium-to-high technology content.

- Ans
- 1. imports
 - 2. fuel efficiency
 - 3. labour intensity
 - 4. comparative advantage

QuestionID:26433064580

Option1ID:264330252912

Option2ID:264330252915

Option3ID:264330252913

Option4ID:264330252914

Status:Answered

ChosenOption: 1

Q.36 Which of the following five-year plan addressed the issue of removal of poverty as a chief objective for the first time?

- Ans
- 1. Fourth Five-year Plan
 - 2. Third Five-year Plan
 - 3. Sixth Five-year Plan
 - 4. Fifth Five-year Plan

QuestionID:264330145228

Option1ID:264330569168

Option2ID:264330569167

Option3ID:264330569170

Option4ID:264330569169

Status:Answered

ChosenOption: 4

Q.37 Which of the following was the first B vitamin discovered in 1897 that is essential in amino acid and carbohydrate metabolism and is active in energy production reactions?

- Ans
- 1. Biotin
 - 2. Riboflavin
 - 3. Thiamine
 - 4. Folate

QuestionID:264330145202

Option1ID:264330569065

Option2ID:264330569064

Option3ID:264330569063

Option4ID:264330569066

Status: Not Attempted and Marked For Review

ChosenOption:--

Q.38 Identify the cultural festival on the basis of given clues:

i) This festival brings together craftsmen like potters, embroiderers, weavers, wood carvers, metal workers, stone smiths and painters from all over India on one platform in Haryana.

ii) This craft mela is held in February every year and provides a glimpse of the state's cultural heritage and recent achievements.

- Ans
- 1. Kapil Muni Fair
 - 2. Shamlaji Fair
 - 3. Chitra Vichitra Fair
 - 4. Surajkund Mela

QuestionID:26433054217

Option1ID:264330211853

Option2ID:264330211852

Option3ID:264330211855

Option4ID:264330211854

Status: Not Attempted and
Marked For Review

ChosenOption:--

Q.39 The duration of the 12th five year plan was from _____ to _____.

- Ans
- 1. 2012 - 2017
 - 2. 1987 - 1992
 - 3. 2007 - 2012
 - 4. 1990 - 1995

QuestionID:264330145251

Option1ID:264330569259

Option2ID:264330569262

Option3ID:264330569260

Option4ID:264330569261

Status: Answered

ChosenOption: 1

Q.40 Manisha Kalyani is associated with which of the following sports events? Ans

- 1. Football
- 2. Hockey
- 3. Cricket
- 4. Chess

QuestionID:264330109689

Option1ID:264330431033

Option2ID:264330431034

Option3ID:264330431035

Option4ID:264330431036

Status: Not Attempted and
Marked For Review

ChosenOption:--

Q.41 A Governor shall, notwithstanding the expiration of his term, continue to hold office until _____.

- Ans
- 1. the President's consent
 - 2. the Legislative Secretary takes charge
 - 3. his/hersuccessor enters his/her office
 - 4. he/she has said and advice of the Chief Minister

QuestionID:264330145265
Option1ID:264330569316
Option2ID:264330569315
Option3ID:264330569318
Option4ID:264330569317
Status:Answered
ChosenOption: 1

Q.42 A government budget shows a primary deficit of ₹6,900 crore. The revenue expenditure on interest payment is ₹400 crore. Fiscal deficit is equal to:

- Ans
- 1. ₹6,500 crore
 - 2. ₹7,300 crore
 - 3. ₹7,100 crore
 - 4. ₹6,900 crore

QuestionID:264330145254
Option1ID:264330569272
Option2ID:264330569271
Option3ID:264330569274
Option4ID:264330569273
Status:Answered
ChosenOption: 2

Q.43 The office of Diwan-i-Inshadealt with which affair in administration? Ans

- 1. State correspondence
- 2. Military
- 3. Finance
- 4. Religious affairs

QuestionID:264330109006
Option1ID:264330428301
Option2ID:264330428303
Option3ID:264330428304
Option4ID:264330428302
Status: Not Attempted and Marked For Review
ChosenOption:--

Q.44 The earth's perihelion occurs in:

- Ans
- 1. July
 - 2. October
 - 3. January
 - 4. September

QuestionID:264330131737
Option1ID:264330516048
Option2ID:264330516050
Option3ID:264330516047
Option4ID:264330516049
Status:Answered
ChosenOption: 4

Q.45 Guru Bipin Singh, who received the honour of Sangeet Natak Akademi Award in 1966 and the Kalidas Samman by Madhya Pradesh Government, was an exponent of which of the following Indian classical dance forms?

- Ans
- 1. Odissi
 - 2. Manipuri
 - 3. Kuchipudi
 - 4. Kathak

QuestionID:264330145153
Option1ID:264330568867
Option2ID:264330568870
Option3ID:264330568869
Option4ID:264330568868
Status: Answered
ChosenOption: 2

Q.46 Who among the following was the youngest recipient of the Padma Vibhushan award in dance in 1984?

- Ans
- 1. Birju Maharaj
 - 2. Rajendra Gangani
 - 3. Abhimanyu Lal
 - 4. Eshhan Hilal

QuestionID:26433054504
Option1ID:264330213002
Option2ID:264330213000
Option3ID:264330213003
Option4ID:264330213001
Status: Not Attempted and Marked For Review
ChosenOption:--

Q.47 When was the Indian Meteorological Department, which collects data on temperature, rainfall, wind, etc., and makes weather forecasts, established by the Government of India?

- Ans
- 1. 1879
 - 2. 1876
 - 3. 1875
 - 4. 1873

QuestionID:264330145191
Option1ID:264330569022
Option2ID:264330569021
Option3ID:264330569020
Option4ID:264330569019
Status: Not Attempted and Marked For Review
ChosenOption:--

Q.48 What is the percentage of proteins in the cell membrane? Ans

- 1. 60-80%
- 2. 80-100%
- 3. 20-40%
- 4. 40-60%

QuestionID:26433086610
Option1ID:264330340083
Option2ID:264330340084
Option3ID:264330340081
Option4ID:264330340082
Status:Answered
ChosenOption: 4

Q.49 Syed Modi International is organised in which sporting event? Ans

- 1. Kabaddi
- 2. Volleyball
- 3. Chess
- 4. Badminton

QuestionID:264330119247
Option1ID:264330467278
Option2ID:264330467275
Option3ID:264330467277
Option4ID:264330467276
Status: Not Attempted and Marked For Review
ChosenOption:--

Q.50 Which dance form of Goa is also known as the 'Warrior Dance'? Ans

- 1. Bihu
- 2. Lavani
- 3. Ghode Modni
- 4. Rauf

QuestionID:26433092388
Option1ID:264330362841
Option2ID:264330362844
Option3ID:264330362842
Option4ID:264330362843
Status:Answered
ChosenOption: 3

Section: Quantitative Aptitude

Q.1 Sukhvir purchased some perishable items for sale but 30% of those items could not be sold and went bad. However, Sukhvir managed to sell the rest of the items at a price that helped him earn an overall profit of 19%. At what percentage above the cost price of each item purchased by Sukhvir did he sell each of the items that did not go bad?

- Ans
- 1. 49%
 - 2. 70%
 - 3. 63%
 - 4. 75%

QuestionID:264330103260

Option1ID:264330405346

Option2ID:264330405347

Option3ID:264330405345

Option4ID:264330405348

Status: **Not Attempted and Marked For Review**

ChosenOption:--

Q.2 An item with a marked price of ₹1,940 was sold at a discount of 15%. At what price (in ₹) was the item sold?

- Ans
- 1. 1659
 - 2. 1639
 - 3. 1649
 - 4. 1654

QuestionID:264330131157

Option1ID:264330513739

Option2ID:264330513741

Option3ID:264330513740

Option4ID:264330513742

Status: **Answered**

ChosenOption: 3

Q.3 A hostel mess requires 217 eggs for a week. How many eggs will it require in total for the months of July, August and September?

- Ans
- 1. 2821
 - 2. 2883
 - 3. 2852
 - 4. 2790

QuestionID:264330103974

Option1ID:264330408197

Option2ID:264330408200

Option3ID:264330408198

Option4ID:264330408199

Status: **Answered**

ChosenOption: 1

Q.4 Find the greatest number which when divides 261,853 and 1221, leaves a remainder of 5 in each case.

Ans 1. 19

2. 18

3. 17

4. 16

QuestionID:26433073062

Option1ID:264330286443

Option2ID:264330286442

Option3ID:264330286441

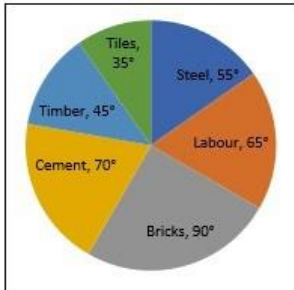
Option4ID:264330286440

Status: **Not Attempted and Marked For Review**

ChosenOption:--

Q.5 Study the given pie-chart and answer the question that follows.

The pie-chart shows total expenditure of ₹3,00,00,000 on different items for constructing a flat in a town.



The percentage of the total expenditure on Labour and Timber is:

Ans 1. $30\frac{5}{9}\%$

2. $30\frac{1}{3}\%$

3. $30\frac{1}{9}\%$

4. $30\frac{7}{9}\%$

QuestionID:264330158282

Option1ID:264330620488

Option2ID:264330620490

Option3ID:264330620487

Option4ID:264330620489

Status: **Not Attempted and Marked For Review**

ChosenOption:--

Q.6 What is the number of valid votes cast in favour of a candidate in an election, if the candidate received 75% of the total valid votes, and 5% of the total votes were declared invalid, given that the total number of voters was 1,46,000?

- Ans
- 1. 1,06,650
 - 2. 1,10,250
 - 3. 1,04,025
 - 4. 1,08,850

QuestionID:264330157711

Option1ID:264330618205

Option2ID:264330618203

Option3ID:264330618206

Option4ID:264330618204

Status: **Not Attempted and Marked For Review**

ChosenOption:--

Q.7 A conical shape vessel has a radius of 21 cm and has a slant height of 25 cm. If the curved part of the vessel is to be painted white, find the cost (in ₹) of painting at the rate of ₹1.5 per cm^2 .

- Ans
- 1. 2475
 - 2. 1650
 - 3. 825
 - 4. 1250

QuestionID:264330145104

Option1ID:264330568674

Option2ID:264330568671

Option3ID:264330568672

Option4ID:264330568673

Status: **Not Attempted and Marked For Review**

ChosenOption:--

Q.8 P and Q can do a work together in 30 days. Q and R can do the same work together in 24 days and R and P together in 20 days. They started the work together, but Q and R left after 10 days. How many more days will P take to finish the remaining work?

- Ans
- 1. 23
 - 2. 21
 - 3. 18
 - 4. 19

QuestionID:264330122719

Option1ID:264330480974

Option2ID:264330480973

Option3ID:264330480971

Option4ID:264330480972

Status: **Not Attempted and Marked For Review**

ChosenOption:--

Q.9 Find the greatest possible length (in metres) that can be used to exactly measure the lengths 6 m, 5 m 25 cm and 12 m 50 cm.

- Ans 1. 0.25 m
 2. 0.75 m
 3. 0.90 m
 4. 0.35 m

QuestionID:26433073063

Option1ID:264330286447

Option2ID:264330286445

Option3ID:264330286444

Option4ID:264330286446

Status: **Not Attempted and Marked For Review**

ChosenOption:--

Q.10 In a village election, Sharuk got 80% of the total valid votes. 10% of the votes were invalid. If the total number of votes was 4500, then find the number of valid votes the other candidate got.

- Ans 1. 620
 2. 450
 3. 530
 4. 810

QuestionID:264330145071

Option1ID:264330568540

Option2ID:264330568539

Option3ID:264330568541

Option4ID:264330568542

Status: **Not Attempted and Marked For Review**

ChosenOption:--

Q.11 What will be the difference between the total surface area and the curved surface area of a hemisphere having 4 cm diameter?

- Ans 1. $5\pi \text{ cm}^2$
 2. $8\pi \text{ cm}^2$
 3. $4\pi \text{ cm}^2$
 4. $4.4\pi \text{ cm}^2$

QuestionID:264330104374

Option1ID:264330409800

Option2ID:264330409798

Option3ID:264330409797

Option4ID:264330409799

Status: **Not Attempted and Marked For Review**

ChosenOption:--

Q.12 A can do a piece of work in 8 days, while B can do it in 7 days. If they work at it alternately beginning with A, then in how many days will the work be completed?

Ans 1. 8

2. $8\frac{1}{2}$

3. $7\frac{1}{2}$

4. 7

QuestionID:26433082414

Option1ID:264330323491

Option2ID:264330323492

Option3ID:264330323490

Option4ID:264330323489

Status: Answered

ChosenOption: 3

Q.13 The cost of painting the total surface area of a 30 m high solid right circular cylinder at the rate of ₹25 per m^2 is ₹18,425. What is the volume (in m^3) of this cylinder [use $\pi = \frac{22}{7}$]?

Ans 1. 1145

2. 1210

3. 1155

4. 1122

QuestionID:264330122876

Option1ID:264330481571

Option2ID:264330481574

Option3ID:264330481573

Option4ID:264330481572

Status: Not Attempted and Marked For Review

ChosenOption:--

Q.14 What is the length (in cm) of the transverse common tangent between two circles with radii 6 cm and 4 cm, given that the distance between their centres is 14 cm?

Ans 1. $2\sqrt{6}$

2. $4\sqrt{6}$

3. $5\sqrt{6}$

4. $3\sqrt{6}$

QuestionID:264330163486

Option1ID:264330641203

Option2ID:264330641205

Option3ID:264330641206

Option4ID:264330641204

Status: Not Attempted and Marked For Review

ChosenOption:--

Q.15 The value of $(1 + \sin^4 A - \cos^4 A) \operatorname{cosec}^2 A$ is:

Ans 1. -2

2. 2

3. 1

4. -1

QuestionID:264330157758

Option1ID:264330618394

Option2ID:264330618393

Option3ID:264330618391

Option4ID:264330618392

Status: **Not Attempted and Marked For Review**

ChosenOption:--

Q.16 The table given below shows the number of products sold by 4 shopkeepers A, B, C and D on four different days.

person \ Days	A	B	C	D
Monday	1000	800	-	750
Tuesday	500	-	900	650
Wednesday	800	1000	700	-
Thursday	-	1200	800	900

If the total products sold by A and B, including all four days, is 3000 and 3500, respectively, the products sold by B on Tuesday is how many more or less than the products sold by A on Thursday?

Ans 1. 300 more

2. 200 less

3. 200 more

4. 300 less

QuestionID:264330167246

Option1ID:264330655982

Option2ID:264330655979

Option3ID:264330655980

Option4ID:264330655981

Status: **Not Attempted and Marked For Review**

ChosenOption:--

Q.17 If an amount of ₹80 becomes ₹96 in 2 years in a bank account which gives simple annual interest, then an amount of ₹62,000 will become _____ in the same account after 5 years.

Ans 1. ₹88,200

2. ₹84,600

3. ₹82,400

4. ₹93,000

QuestionID:264330117926

Option1ID:264330463522

Option2ID:264330463520

Option3ID:264330463519

Option4ID:264330463521

Status: **Not Attempted and Marked For Review**

ChosenOption:--

Q.18

If $a \propto b$, $b \propto \frac{1}{c}$ and $c \propto d$, then the relation between a and d is:

Ans

✓ 1. $a \propto \frac{1}{d}$

✗ 2. $a \propto d$

✗ 3. $a \propto d^2$

✗ 4. $a \propto \sqrt{d}$

QuestionID:264330145072

Option1ID:264330568544

Option2ID:264330568543

Option3ID:264330568545

Option4ID:264330568546

Status:Answered

ChosenOption: 1

Q.19 Study the given table and answer the question that follows.

The table shows the production of five types of cars P, Q, R, S and T by a company from the year 1989 to 1994.

Type of Car	1989	1990	1991	1992	1993	1994	Total
P	8	20	16	17	21	6	88
Q	16	10	14	12	12	14	78
R	21	17	16	15	13	8	90
S	4	6	10	16	20	31	87
T	25	18	19	30	14	27	133
Total	74	71	75	90	80	86	476

During the period 1989-94, which type of car featured a continuous increase in production?

Ans

✓ 1. S

✗ 2. Q

✗ 3. R

✗ 4. P

QuestionID:264330165465

Option1ID:264330648942

Option2ID:264330648940

Option3ID:264330648941

Option4ID:264330648939

Status:Answered

ChosenOption: 4

Q.20

Evaluate $6.9 - [8.6 - \{6.5 - (5.4 - \overline{4.3 - 2})\}]$.

Ans

✗ 1. 1.8

✗ 2. 1.9

✗ 3. 1.6

✓ 4. 1.7

QuestionID:26433063983

Option1ID:264330250526

Option2ID:264330250527

Option3ID:264330250525

Option4ID:264330250524

Status:Not Attempted and Marked For Review

ChosenOption:--

Q.21 A thief is noticed by a policeman from a distance of 300m. The thief starts running and the policeman starts chasing him. The thief and policeman run at the rate of 11 km/h and 13 km/h, respectively. After running for how many kilometres will the policeman be able to catch the thief?

- Ans
- 1. 1.65
 - 2. 1.85
 - 3. 1.75
 - 4. 1.95

QuestionID:26433082987

Option1ID:264330325781

Option2ID:264330325783

Option3ID:264330325782

Option4ID:264330325784

Status: **Not Attempted and Marked For Review**

ChosenOption:--

Q.22 A sum of ₹1,00,000 was taken from a bank at the rate of 7% p.a. to be compounded annually for 5 years. Calculate the compound interest. (Closest to a ₹)

- Ans
- 1. ₹40,000
 - 2. ₹20,963
 - 3. ₹40,567
 - 4. ₹40,255

QuestionID:264330145083

Option1ID:264330568587

Option2ID:264330568590

Option3ID:264330568589

Option4ID:264330568588

Status: **Not Attempted and Marked For Review**

ChosenOption:--

Q.23 The curved surface area of a cone whose base radius is 7cm and slant height is 10cm is:

- Ans
- 1. 280 cm^2
 - 2. 250 cm^2
 - 3. 300 cm^2
 - 4. 220 cm^2

QuestionID:264330103753

Option1ID:264330407319

Option2ID:264330407318

Option3ID:264330407320

Option4ID:264330407317

Status: **Not Attempted and Marked For Review**

ChosenOption:--

Q.24 A sector of a circle has a central angle of 45° and an arc length of 22 cm.

Find the radius of the circle. (Use $\pi = \frac{22}{7}$.)

Ans 1.32cm

2.35cm

3.28cm

4.36cm

QuestionID:264330163481

Option1ID:264330641185

Option2ID:264330641183

Option3ID:264330641184

Option4ID:264330641186

Status: **Not Attempted and
Marked For Review**

ChosenOption:--

Q.25 The least common multiple of 210, 336 and 504 is:

Ans 1. 5040

2. 3360

3. 2100

4. 4560

QuestionID:26433066160

Option1ID:264330259173

Option2ID:264330259172

Option3ID:264330259174

Option4ID:264330259175

Status: **Not Attempted and
Marked For Review**

ChosenOption:--

Q.26 The LCM of $\frac{1}{3}$, $\frac{3}{5}$, $\frac{4}{7}$ and $\frac{9}{16}$ is:

Ans 1. 36

2. 49

3. 38

4. 81

QuestionID:264330145041

Option1ID:264330568419

Option2ID:264330568421

Option3ID:264330568420

Option4ID:264330568422

Status: **Not Attempted and
Marked For Review**

ChosenOption:--

Q.27 Study the given table and answer the question that follows.

The table shows the number of students doing various courses in various cities.

City	MBA	MCA	M.Sc.	M.Com.	M.A.	Total
Ahmedabad	1234	1384	1440	1289	1332	6679
Bengaluru	1156	1783	1874	1003	1340	7156
Bhopal	1187	1347	1532	1321	1486	6873
Chennai	1342	1473	1129	1765	1666	7375
New Delhi	1230	1098	1128	1865	1777	7098
Hyderabad	1456	1234	1556	1653	1789	7688
Kolkata	1239	1785	1865	1504	1762	8155

In Chennai, the number of students in MBA is nearly what percentage of students in M.A? (rounded off to 2 digits after decimal)

- Ans
- 1. 76.25%
 - 2. 80.55%
 - 3. 92.12%
 - 4. 99.23%

QuestionID:264330145102

Option1ID:264330568663

Option2ID:264330568664

Option3ID:264330568665

Option4ID:264330568666

Status: **Not Attempted and Marked For Review**

ChosenOption:--

Q.28 If $\cos A = \frac{15}{17}$, $0 \leq A \leq 90^\circ$, then the value of $\cot(90^\circ - A)$ is:

- Ans
- 1. $\frac{8}{15}$
 - 2. $\frac{2\sqrt{2}}{15}$
 - 3. $\frac{\sqrt{2}}{15}$
 - 4. $\frac{7}{15}$

QuestionID:264330157751

Option1ID:264330618364

Option2ID:264330618366

Option3ID:264330618365

Option4ID:264330618363

Status: **Answered**

ChosenOption: 1

Q.29 Study the given table and answer the question that follows.

The table shows the number of cakes sold by four different bakeries in 4 different months.

Month \ Bakery	August	September	October	November
P	250	241	213	168
Q	175	189	201	122
R	164	145	129	168
S	224	154	184	209

What is the difference between the total number of cakes sold by bakeries Q and S together in September and the total number of cakes sold by bakeries P and R together in November?

- Ans 1.7
 2.9
 3.10
 4.8

QuestionID:264330158259

Option1ID:264330620398

Option2ID:264330620396

Option3ID:264330620395

Option4ID:264330620397

Status: **Not Attempted and Marked For Review**

ChosenOption:--

Q.30 The volume of a right circular cone having a base diameter of 14 cm is $196\pi\text{cm}^3$. Find the perpendicular height of this cone

- Ans 1. 10 cm
 2. 12cm
 3. 14cm
 4. 8cm

QuestionID:264330145117

Option1ID:264330568724

Option2ID:264330568725

Option3ID:264330568726

Option4ID:264330568723

Status: **Not Attempted and Marked For Review**

ChosenOption:--

Q.31

Find the LCM of $\frac{3}{2}$, $\frac{81}{16}$ and $\frac{9}{8}$.

Ans

1. $\frac{91}{2}$

2. $\frac{81}{2}$

3. $\frac{111}{2}$

4. $\frac{101}{2}$

QuestionID:26433080080

Option1ID:264330314269

Option2ID:264330314268

Option3ID:264330314271

Option4ID:264330314270

Status: **Not Attempted and
Marked For Review**

ChosenOption:--

Q.32

If $\frac{A}{L} + \frac{M}{B} = 1$ and $\frac{B}{M} + \frac{N}{C} = 1$, then the value of $\frac{L}{A} + \frac{C}{N}$ is:

Ans

1. $\frac{B}{M}$

2. 0

3. 1

4. $\frac{M}{B}$

QuestionID:264330157777

Option1ID:264330618470

Option2ID:264330618468

Option3ID:264330618467

Option4ID:264330618469

Status: **Not Attempted and
Marked For Review**

ChosenOption:--

Q.33 The perimeter of a sector of a circle is 24 cm and the radius is 3 cm. Calculate the area (in cm^2) of the sector.

Ans

1. 24

2. 33

3. 27

4. 30

QuestionID:264330163482

Option1ID:264330641187

Option2ID:264330641190

Option3ID:264330641188

Option4ID:264330641189

Status: **Not Attempted and
Marked For Review**

ChosenOption:--

Q.34 Study the given table and answer the question that follows.

The table shows the production of five types of cars P, Q, R, S and T by a company from the year 1989 to 1994.

Type of Car	1989	1990	1991	1992	1993	1994	Total
P	8	20	16	17	21	6	88
Q	16	10	14	12	12	14	78
R	21	17	16	15	13	8	90
S	4	6	10	16	20	31	87
T	25	18	19	30	14	27	133
Total	74	71	75	90	80	86	476

During the period 1989-94, which type of car featured a continuous decrease in production?

- Ans
- 1. S
 - 2. Q
 - 3. R
 - 4. T

QuestionID:264330165466

Option1ID:264330648945

Option2ID:264330648943

Option3ID:264330648944

Option4ID:264330648946

Status: Not Attempted and Marked For Review

ChosenOption:--

Q.35 Find the value of $\frac{\cos 65^\circ}{\sin 25^\circ} + \frac{5 \sin 19^\circ}{\cos 71^\circ} - \frac{3 \cos 28^\circ}{\sin 62^\circ}$.

- Ans
- 1. 2
 - 2. 0
 - 3. 1
 - 4. 3

QuestionID:264330158292

Option1ID:264330620529

Option2ID:264330620527

Option3ID:264330620528

Option4ID:264330620530

Status: Not Attempted and Marked For Review

ChosenOption:--

Q.36 Swastik saves 20% of his income while spends the remaining amount on food, rent, education and shopping. 15% of the income is spent on food, while ₹12,800 is spent on rent, ₹32,000 on education and ₹7,200 on shopping. The amount spent on shopping is 11.25% of the total expenditure. How much money (in ₹) is spent on food?

- Ans
- 1. 9600
 - 2. 10800
 - 3. 12000
 - 4. 15000

QuestionID:264330103315

Option1ID:264330405567

Option2ID:264330405568

Option3ID:264330405565

Option4ID:264330405566

Status: Not Attempted and Marked For Review

ChosenOption:--

Q.37 Simplify the given expression.

$$\frac{a^2 - b^2 - 2bc - c^2}{a^2 + b^2 + 2ab - c^2}$$

Ans

1. $\frac{a + b + c}{a - b - c}$

2. $\frac{a - b - c}{a + b - c}$

3. $\frac{a + b - c}{a - b - c}$

4. $\frac{a - b + c}{a + b - c}$

QuestionID:264330157767

Option1ID:264330618430

Option2ID:264330618429

Option3ID:264330618428

Option4ID:264330618427

Status: **Not Attempted and Marked For Review**

ChosenOption:--

Q.38 If the marked price is 75% more than the cost price and a discount of 40% is allowed on the marked price, then the percentage profit is:

Ans 1. 6%

2. 7%

3. 8%

4. 5%

QuestionID:264330104505

Option1ID:264330410324

Option2ID:264330410321

Option3ID:264330410322

Option4ID:264330410323

Status: **Not Attempted and Marked For Review**

ChosenOption:--

Q.39 In what ratio must a shopkeeper mix two types of rice worth ₹55 per kg and ₹70 per kg, so that the average cost of the mixture is ₹65 per kg?

Ans 1. 1 : 2

2. 2 : 3

3. 3 : 2

4. 1 : 3

QuestionID:264330105977

Option1ID:264330416212

Option2ID:264330416209

Option3ID:264330416210

Option4ID:264330416211

Status: **Not Attempted and Marked For Review**

ChosenOption:--

Q.40 What is the value of the given expression?

$$\frac{1}{12} + \frac{1}{16} + \frac{1}{8}$$

Ans

✓ 1. $\frac{13}{48}$

✗ 2. $\frac{10}{72}$

✗ 3. $\frac{3}{48}$

✗ 4. $\frac{13}{18}$

QuestionID:26433063280

Option1ID:264330247773

Option2ID:264330247775

Option3ID:264330247772

Option4ID:264330247774

Status: Answered

ChosenOption: 1

Q.41 For a triangle ABC, D and E are two points on AB and AC such that $AD = \frac{1}{6} AB$, $AE = \frac{1}{6} AC$. If $BC = 22$ cm, then DE is _____. (Consider up to two decimals)

Ans ✗ 1. 1.33 cm

✗ 2. 2.1.67 cm

✓ 3. 3.67 cm

✗ 4. 4.3.33 cm

QuestionID:264330145114

Option1ID:264330568714

Option2ID:264330568711

Option3ID:264330568713

Option4ID:264330568712

Status: Not Attempted and Marked For Review

ChosenOption:--

Q.42 Reema runs $\frac{5}{4}$ times as fast as Rekha. In view of this Reema allows Rekha a lead of 50 metres to Rekha in a friendly race competition. What is the distance from the starting point where both Reema and Rekha meet?

Ans ✓ 1. 250 m

✗ 2. 2.225m

✗ 3. 3.200m

✗ 4. 4.240m

QuestionID:264330145027

Option1ID:264330568363

Option2ID:264330568364

Option3ID:264330568365

Option4ID:264330568366

Status: Not Attempted and Marked For Review

ChosenOption:--

Q.43 The given table shows marks obtained by four students in four subjects.

Subjects Student	Maths (100)	English (100)	Science (100)	Hindi (100)
A	75	80	75	85
B	80	70	70	80
C	70	85	85	75
D	85	75	80	70

The average percentage of marks obtained by all students in Hindi is: Ans

1. 77.0%

2. 77.6%

3. 77.8%

4. 77.5%

QuestionID:264330165488

Option1ID:264330649032

Option2ID:264330649031

Option3ID:264330649034

Option4ID:264330649033

Status: **Not Attempted and
Marked For Review**

ChosenOption:--

Q.44 If $\cot \theta = \frac{4}{3}$, $0 < \theta < \frac{\pi}{2}$, and $5p \cos^2 \theta \sin \theta = \cot^2 \theta$, then the value of p is:

Ans

1. $\frac{7}{27}$

2. $\frac{125}{27}$

3. $\frac{5}{27}$

4. $\frac{25}{27}$

QuestionID:264330145122

Option1ID:264330568746

Option2ID:264330568745

Option3ID:264330568744

Option4ID:264330568743

Status: **Answered**

ChosenOption: 4

Q.45 Train 'A' requires 15 seconds to cross train 'B' of length 300 m moving in the opposite direction at a speed of 36 km/h. Further, train 'A' requires 30 seconds to cross a 500 m long stationary train 'C'. Find the length (in m) of train 'A'.

- Ans 1. 200
 2. 300
 3. 250
 4. 275

QuestionID:264330103990

Option1ID:264330408264

Option2ID:264330408261

Option3ID:264330408263

Option4ID:264330408262

Status: **Not Attempted and
Marked For Review**

ChosenOption:--

Q.46 If the difference between the selling prices of an article at profit of 10% and 7% is ₹6, then the cost price (in ₹) of the article is:

- Ans 1. 175
 2. 150
 3. 200
 4. 100

QuestionID:264330102344

Option1ID:264330401843

Option2ID:264330401842

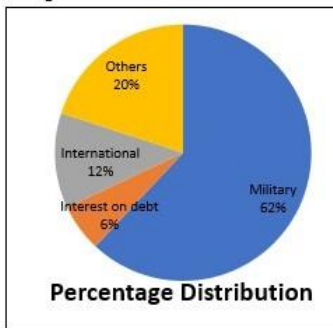
Option3ID:264330401844

Option4ID:264330401841

Status: **Not Attempted and
Marked For Review**

ChosenOption:--

Q.47 Study the given pie-chart and answer the question that follows.
The pie-chart shows the National Budget Expenditure in the year 2019.



If ₹850 billion were spent in year 2019 for interest on debt and military, then what would have been the total expenditure for that year (in ₹ billion)?

- Ans
- 1. 1,700
 - 2. 1,300
 - 3. 1,250
 - 4. 1,450

QuestionID:264330158281

Option1ID:264330620483

Option2ID:264330620485

Option3ID:264330620486

Option4ID:264330620484

Status: Not Attempted and
Marked For Review

ChosenOption:--

Q.48 John can do a piece of work alone in 20 days, while Ravi can do the same piece of work alone in 28 days. In how many days can the duo complete the same work if they work together?

- Ans
- 1. $11\frac{1}{3}$
 - 2. $12\frac{2}{3}$
 - 3. $11\frac{2}{3}$
 - 4. $12\frac{1}{3}$

QuestionID:264330103284

Option1ID:264330405442

Option2ID:264330405444

Option3ID:264330405441

Option4ID:264330405443

Status: Not Attempted and
Marked For Review

ChosenOption:--

Q.49 At a courier shop, the weights of 8 parcels were found to be 1.5 kg, 1.25 kg, 1.35 kg, 750 gm, 950 gm, 0.7 kg, 0.4 kg, and 0.5 kg. Find their average weight.

- Ans
- 1. 875gm
 - 2. 900gm
 - 3. 925gm
 - 4. 700gm

QuestionID:264330109236

Option1ID:264330429221

Option2ID:264330429223

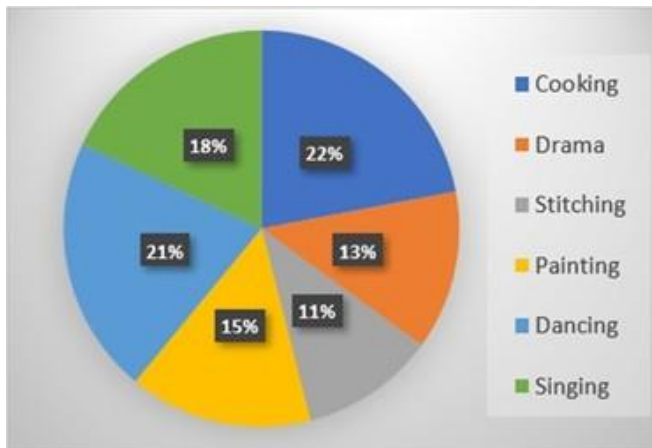
Option3ID:264330429224

Option4ID:264330429222

Status: Answered

ChosenOption: 3

Q.50 Study the given pie-chart and answer the question that follows. The pie-chart shows the percentage of 3600 students enrolled in different hobby classes in a school.



The number of students enrolled in Painting classes is approximately what percentage of those enrolled in Singing classes?

- Ans
- 1. 108%
 - 2. 83%
 - 3. 98%
 - 4. 78%

QuestionID:264330157735

Option1ID:264330618302

Option2ID:264330618300

Option3ID:264330618301

Option4ID:264330618299

Status: Answered

ChosenOption: 1

Select the option that can be used as a one-word substitute for the given group of words.

Study of science of insects

- Ans 1. Entomology
 2. Anthropology
 3. Microbiology
 4. Ecology

QuestionID:26433088991
Option1ID:264330349501
Option2ID:264330349502
Option3ID:264330349504
Option4ID:264330349503
Status:Answered
ChosenOption: 1

Select the most appropriate ANTONYM of the given word.

Apathy

- Ans 1. Interruption
 2. Ignorance
 3. Interest
 4. Sincerity

QuestionID:26433099134
Option1ID:264330389149
Option2ID:264330389152
Option3ID:264330389150
Option4ID:264330389151
Status:Not Attempted and Marked For Review
ChosenOption:--

Select the option that can be used as a one-word substitute for the given group of words.

One who settles in another country

- Ans 1. Resident
 2. Immigrant
 3. Traveller
 4. Refugee

QuestionID:26433088532
Option1ID:264330347704
Option2ID:264330347701
Option3ID:264330347703
Option4ID:264330347702
Status:Answered
ChosenOption: 2

Q.4 Select the most appropriate option that can substitute the underlined segment in the given sentence. If there is no need to substitute it, select 'No substitution required'. The Taj Mahal is one of the much popular seven wonders of the world.

- Ans
- 1. No substitution required
 - 2. more
 - 3. much more
 - 4. most

QuestionID:26433070768
Option1ID:264330277531
Option2ID:264330277529
Option3ID:264330277528
Option4ID:264330277530
Status:Answered
ChosenOption: 4

Q.5 Select the INCORRECTLY spelt word from the given sentence. Gandhiji considered untouchability to be one of India's major social ills.

- Ans
- 1. social
 - 2. major
 - 3. considared
 - 4. untouchability

QuestionID:264330164526
Option1ID:264330645298
Option2ID:264330645297
Option3ID:264330645295
Option4ID:264330645296
Status:Answered
ChosenOption: 3

Q.6 Select the most appropriate meaning of the given idiom.

Crack someone up

- Ans
- 1. To criticise someone
 - 2. To force someone to commit a mistake
 - 3. To make someone angry
 - 4. To make someone laugh

QuestionID:264330163404
Option1ID:264330640896
Option2ID:264330640898
Option3ID:264330640895
Option4ID:264330640897
Status:Answered
ChosenOption: 1

Q.7 Select the most appropriate synonym of the given word. Captivate

- Ans 1. Study
 2. Allure
 3. Envelope
 4. Arrest

QuestionID:264330102432

Option1ID:264330402176

Option2ID:264330402174

Option3ID:264330402175

Option4ID:264330402173

Status: **Not Attempted and
Marked For Review**

ChosenOption:--

Q.8 Select the option that can be used as a one-word substitute for the given group of words.

The capacity for being useful for some purpose.

- Ans 1. Gain
 2. Utility
 3. Desirability
 4. Aid

QuestionID:26433090451

Option1ID:264330355265

Option2ID:264330355266

Option3ID:264330355268

Option4ID:264330355267

Status: **Answered**

ChosenOption: 2

Q.9 Select the most appropriate ANTONYM of the given word.

Rejoinder

- Ans 1. Expedite
 2. Reply
 3. Ordinary
 4. Request

QuestionID:264330163379

Option1ID:264330640806

Option2ID:264330640803

Option3ID:264330640804

Option4ID:264330640805

Status: **Not Attempted and
Marked For Review**

ChosenOption:--

Q.10 Select the sentence that has a spelling error.

- A- The heart of living is learnt easily by those who are positive and optimistic.
- B- We can learn a lot about the heart of living by having a peep into the lives of great men.
- C- The daily routines of these great men disseminate that they are different.
- D- Their unique lifestyle helps learn certain habits and practices that they followed.

- Ans
- 1. The daily routines of these great men disseminate that they are different.
 - 2. Their unique lifestyle helps learn certain habits and practices that they followed.
 - 3. We can learn a lot about the heart of living by having a peep into the lives of great men.
 - 4. The heart of living is learnt easily by those who are positive and optimistic.

QuestionID:264330141561

Option1ID:264330554581

Option2ID:264330554582

Option3ID:264330554580

Option4ID:264330554579

Status:Answered

ChosenOption: 2

Q.11 Select the correct idiom to replace the underlined segment in the given sentence.

We should ask Emily to join our team. She is as keen as a butter.

- Ans
- 1. as keen as a bee
 - 2. as keen as mustard
 - 3. as keen as salt
 - 4. as keen as sugar

QuestionID:26433092313

Option1ID:264330362550

Option2ID:264330362551

Option3ID:264330362549

Option4ID:264330362552

Status:Answered

ChosenOption: 1

Q.12 Choose the correct spelling of the underlined word in the given sentence. He has won the medal for the twelfth time.

- Ans
- 1. Twelfth
 - 2. Twwelfth
 - 3. Twelfth
 - 4. Twelth

QuestionID:264330117377

Option1ID:264330461549

Option2ID:264330461551

Option3ID:264330461550

Option4ID:264330461552

Status:Answered

ChosenOption: 1

Q.13 Select the most appropriate meaning of the given idiom.

What a small world!

- Ans 1. The world is great.
 2. What a beautiful place!
 3. The world is a village.
 4. What a coincidence!

QuestionID:26433099940

Option1ID:264330392334

Option2ID:264330392336

Option3ID:264330392333

Option4ID:264330392335

Status:Answered

ChosenOption: 4

Q.14 Select the most appropriate option that can substitute the underlined segment in the given sentence.

Payal's father was seen desperately searching for the medicines that can counteract the effect of a venomous snakebite in Parul's left hand.

- Ans 1. antiseptic
 2. anti-serum
 3. remedy
 4. antidote

QuestionID:26433070594

Option1ID:264330276840

Option2ID:264330276842

Option3ID:264330276843

Option4ID:264330276841

Status:Answered

ChosenOption: 4

Q.15 Select the most appropriate ANTONYM of the given word. Asset

- Ans 1. Mole
 2. Liability
 3. Wealth
 4. Refuge

QuestionID:264330167909

Option1ID:264330658555

Option2ID:264330658558

Option3ID:264330658557

Option4ID:264330658556

Status:Answered

ChosenOption: 2

Q.16 Select the INCORRECTLY spelt word. Ans

- 1. Merriment
- 2. Yearn
- 3. Zenith
- 4. Miniture

QuestionID:26433091838
Option1ID:264330360690
Option2ID:264330360692
Option3ID:264330360691
Option4ID:264330360689
Status:Answered
ChosenOption: 4

Q.17 Select the most appropriate ANTONYM of the given word. Placid

- Ans
- 1. Turbulent
 - 2. Pensive
 - 3. Pristine
 - 4. Destined

QuestionID:26433097020
Option1ID:264330380815
Option2ID:264330380816
Option3ID:264330380813
Option4ID:264330380814
Status: Not Attempted and Marked For Review
ChosenOption:--

Q.18 Choose the most suitable idiom for the given situation.

Ravi has a strong desire to be in college hockey team this year and he is working hard to gain such skill to fulfill his goal of life. He has clearly made up his mind to achieve his target.

- Ans
- 1. To rise to the occasion
 - 2. To make the cut
 - 3. Set sight on
 - 4. To move the goal posts

QuestionID:264330137462
Option1ID:264330538474
Option2ID:264330538472
Option3ID:264330538473
Option4ID:264330538471
Status: Not Attempted and Marked For Review
ChosenOption:--

Q.19 Select the INCORRECTLY spelt word. Ans

- 1. Bread
- 2. Pasta
- 3. Noodle
- 4. Pizta

QuestionID:26433089012
Option1ID:264330349588
Option2ID:264330349586
Option3ID:264330349585
Option4ID:264330349587
Status:Answered
ChosenOption: 4

Q.20 Identify the sentence that correctly uses the indefinite article.

- Ans
- 1. There are three cars parked outside: a Mercedes, an Jaguar and a Fiat.
 - 2. There are three cars parked outside: an Mercedes, a Jaguar and a Fiat.
 - 3. There are three cars parked outside: a Mercedes, a Jaguar and a Fiat.
 - 4. There are three cars parked outside: a Mercedes, an Jaguar and a Fiat.

QuestionID:26433059561
Option1ID:264330233094
Option2ID:264330233093
Option3ID:264330233092
Option4ID:264330233095
Status:Answered
ChosenOption: 3

Q.21 You are preparing a speech for an upcoming function. Select a synonym for the highlighted word to make it better.

Effective public transportation networks may greatly alleviate traffic congestion and enhance inhabitants' quality of life in general.

- Ans
- 1. Amplification
 - 2. Diversion
 - 3. Gridlock
 - 4. Laxity

QuestionID:264330121904
Option1ID:264330477774
Option2ID:264330477772
Option3ID:264330477771
Option4ID:264330477773
Status:Answered
ChosenOption: 3

Q.22 Select the option that can be used as a one-word substitute for the given group of words.

Happening repeatedly

- Ans
- 1. Recuperate
 - 2. Recurrent
 - 3. Rapport
 - 4. Regression

QuestionID:26433073674

Option1ID:264330288837

Option2ID:264330288836

Option3ID:264330288839

Option4ID:264330288838

Status: Answered

ChosenOption: 2

Q.23 Select the correct idiom that can substitute the italicised group of words in the given sentence.

Here all *stinks and smells foul* after a hard session at the gym.

- Ans
- 1. an old flame
 - 2. an iron will
 - 3. pen and ink
 - 4. lame excuse

QuestionID:26433094782

Option1ID:264330371953

Option2ID:264330371955

Option3ID:264330371956

Option4ID:264330371954

Status: Not Attempted and Marked For Review

ChosenOption: --

Q.24 The following sentence has been divided into parts. One of them may contain an error. Select the part that contains the error from the given options. If you don't find any error, mark 'No error' as your answer.

I wanted to buy a candle holder, but the store didn't have one. / So, I got a cake.

- Ans
- 1. No error
 - 2. but the store didn't have one
 - 3. I wanted to buy a candle holder
 - 4. So, I got a cake

QuestionID:26433059551

Option1ID:264330233055

Option2ID:264330233053

Option3ID:264330233052

Option4ID:264330233054

Status: Answered

ChosenOption: 2

Q.25 Select the most appropriate idiom to fill in the blank.
All my efforts went in vain. The project on which I was working for the last two months has failed and we are _____.

- Ans
- 1. all in the seventh heaven
 - 2. back to square one
 - 3. on the fly
 - 4. around the bend

QuestionID:264330134221
Option1ID:264330525880
Option2ID:264330525879
Option3ID:264330525881
Option4ID:264330525882
Status: Answered
ChosenOption: 2

Q.26 Select the most appropriate idiom to fill in the blank.
Choosing not to pursue a degree in computer engineering was _____, as the market for them is extremely limited nowadays.

- Ans
- 1. airy fairy
 - 2. acut above
 - 3. an elevator pitch
 - 4. a blessing in disguise

QuestionID:264330134219
Option1ID:264330525871
Option2ID:264330525873
Option3ID:264330525874
Option4ID:264330525872
Status: Not Attempted and Marked For Review
ChosenOption:--

Q.27 Select the option that can be used as a one-word substitute for the given group of words.

A person who believes that God does not exist

- Ans
- 1. Atheist
 - 2. Fanatic
 - 3. Epicurean
 - 4. Hedonistic

QuestionID:26433088195
Option1ID:264330346375
Option2ID:264330346374
Option3ID:264330346376
Option4ID:264330346373
Status: Answered
ChosenOption: 1

Q.28 Select the most appropriate ANTONYM of the word 'discordant' in the given sentence and choose the correct option.

The sweet melodious symphony of the piano filled the room, transporting the listeners to a world of beauty and emotion.

- Ans
- 1. Filled
 - 2. Melodious
 - 3. Transporting
 - 4. Emotion

QuestionID:264330163538

Option1ID:264330641408

Option2ID:264330641407

Option3ID:264330641409

Option4ID:264330641410

Status: Not Attempted and Marked For Review

ChosenOption:--

Q.29 Select the correct option to substitute the underlined segment in the given sentence. If no substitution is required, select 'No substitution'.

He is faster than smarter.

- Ans
- 1. more fast than smart
 - 2. fast than smart
 - 3. faster than being smart
 - 4. No substitution

QuestionID:26433090823

Option1ID:264330356713

Option2ID:264330356715

Option3ID:264330356714

Option4ID:264330356716

Status: Not Attempted and Marked For Review

ChosenOption:--

Q.30 Part of the following sentence have been given as options. One of them may contain an error. Select the part that contains the error from the given options. If you don't find any error, mark 'No error' as your answer.

You arrived two days ago. By the time you leave, you will have spent nine days here.

- Ans
- 1. You arrived two days ago
 - 2. No error
 - 3. By the time you leave
 - 4. you will have spent nine days here

QuestionID:26433090496

Option1ID:264330355433

Option2ID:264330355436

Option3ID:264330355434

Option4ID:264330355435

Status: Not Attempted and Marked For Review

ChosenOption:--

Q.31 Select the option that can be used as a one-word substitute for the given group of words.

The study of the human mind

- Ans 1. Psychology
 2. Microbiology
 3. Epidemiology
 4. Anthropology

QuestionID:26433088754
Option1ID:264330348572
Option2ID:264330348571
Option3ID:264330348570
Option4ID:264330348569

Status: Answered

ChosenOption: 1

Q.32 Select the most appropriate option to substitute the underlined segment in the given sentence.

Any sort of unfair conduct is not tolerated in international sports tournaments as it can completely ruin an athlete's career.

- Ans 1. straw in the eye
 2. hand in the mud
 3. foul play
 4. red handed

QuestionID:26433092923
Option1ID:264330364961
Option2ID:264330364963
Option3ID:264330364964
Option4ID:264330364962

Status: Answered

ChosenOption: 3

Q.33 Select the most appropriate ANTONYM of the given word. Denounce

- Ans 1. Praise
 2. Relieve
 3. Criticise
 4. Dainty

QuestionID:264330165246
Option1ID:264330648084
Option2ID:264330648085
Option3ID:264330648083
Option4ID:264330648086

Status: Not Attempted and
Marked For Review

ChosenOption: --

Q.34 Select the most appropriate ANTONYM of the given word.

Leniency

- Ans
- 1. Penalty
 - 2. Favour
 - 3. Sternness
 - 4. Discard

QuestionID:264330163374

Option1ID:264330640786

Option2ID:264330640783

Option3ID:264330640785

Option4ID:264330640784

Status: **Not Attempted and Marked For Review**

ChosenOption:--

Q.35 Select the most appropriate synonym of the word 'viable' in the given sentence and choose the correct option.

The engineer's design was optimised for efficiency and scalability, with a focus on sustainability.

- Ans
- 1. Efficiency
 - 2. Optimised
 - 3. Scalability
 - 4. Sustainability

QuestionID:264330163534

Option1ID:264330641392

Option2ID:264330641391

Option3ID:264330641393

Option4ID:264330641394

Status: **Answered**

ChosenOption: 2

Q.36 The following sentence has been split into four segments. Identify the segment that contains a grammatical error.

A Prime Minister of India / will address / the nation today / on the occasion of Independence Day.

- Ans
- 1. A Prime Minister of India
 - 2. the nation today
 - 3. on the occasion of Independence Day
 - 4. will address

QuestionID:264330120604

Option1ID:264330472655

Option2ID:264330472657

Option3ID:264330472658

Option4ID:264330472656

Status: **Answered**

ChosenOption: 1

Q.37 Select the most appropriate idiom to fill in the blank.

I think we should _____ before buying this car.

- Ans
- 1. eat like a horse
 - 2. hold our horses
 - 3. stop to change horses
 - 4. get off our high horse

QuestionID:264330163337
Option1ID:264330640647
Option2ID:264330640650
Option3ID:264330640648
Option4ID:264330640649
Status:Answered
ChosenOption: 2

Q.38 Select the correct idiom to substitute the underlined word segment in the following sentence.
She trusted her husband but he stabbed her in the neck when he usurped her inheritance.

- Ans
- 1. stabbed her in the back
 - 2. stabbed her prospects
 - 3. stabbed her with a fork
 - 4. snapped her in the neck

QuestionID:264330101448
Option1ID:264330398303
Option2ID:264330398302
Option3ID:264330398301
Option4ID:264330398304
Status:Answered
ChosenOption: 2

Q.39 Select the option that can be used as a one-word substitute for the given group of words.
A keeper or custodian of a museum or other collection

- Ans
- 1. Cartographer
 - 2. Calligrapher
 - 3. Curator
 - 4. Chauffeur

QuestionID:264330164300
Option1ID:264330644415
Option2ID:264330644418
Option3ID:264330644417
Option4ID:264330644416
Status:Answered
ChosenOption: 3

Q.40 Part of the following sentence have been given as options. Select the option that contains an error.

Raman ate the cake and exclaimed that it tasted sweetly.

- Ans
- 1. the cake
 - 2. and exclaimed that
 - 3. it tasted sweetly
 - 4. Raman ate

QuestionID:264330134121

Option1ID:264330525508

Option2ID:264330525509

Option3ID:264330525510

Option4ID:264330525507

Status: Answered

ChosenOption: 3

Comprehension:

In the following passage, some words have been deleted. Read the passage carefully and select the most appropriate option to fill in each blank.

South Korea is the most cosmetically (1) _____ country on Earth. Beauty editors estimate that it is because of the government's heavy investment (2) _____ industry. It is ahead of its competitors, and its citizens (3) _____ twice as much on skincare products as consumers in the United States, the UK, and France. Korean shoppers are (4) _____ the world's most discerning. Eight out of 10 Korean women in their 20s and 30s use an app that (5) _____ like a cosmetics-specific, to debate the merits of various common ingredients.

SubQuestionNo:41

Q.41 Select the most appropriate option to fill in blank number 1. Ans

- 1. ancient
- 2. primitive
- 3. advanced
- 4. early

QuestionID:264330164225

Option1ID:264330644135

Option2ID:264330644137

Option3ID:264330644136

Option4ID:264330644138

Status: Answered

ChosenOption: 3

Comprehension:

In the following passage, some words have been deleted. Read the passage carefully and select the most appropriate option to fill in each blank.

South Korea is the most cosmetically (1) _____ country on Earth. Beauty editors estimate that it is because of the government's heavy investment (2) _____ industry. It is ahead of its competitors, and its citizens (3) _____ twice as much on skincare products as consumers in the United States, the UK, and France. Korean shoppers are (4) _____ the world's most discerning. Eight out of 10 Korean women in their 20s and 30s use an app that (5) _____ like a cosmetics-specific, to debate the merits of various common ingredients.

SubQuestionNo:42

Q.42 Select the most appropriate option to fill in blank number 2. Ans

- 1. of the
- 2. by the
- 3. in the
- 4. from the

QuestionID:264330164226

Option1ID:264330644139

Option2ID:264330644140

Option3ID:264330644141

Option4ID:264330644142

Status:Answered

ChosenOption: 3

Comprehension:

In the following passage, some words have been deleted. Read the passage carefully and select the most appropriate option to fill in each blank.

South Korea is the most cosmetically (1) _____ country on Earth. Beauty editors estimate that it is because of the government's heavy investment (2) _____ industry. It is ahead of its competitors, and its citizens (3) _____ twice as much on skincare products as consumers in the United States, the UK, and France. Korean shoppers are (4) _____ the world's most discerning. Eight out of 10 Korean women in their 20s and 30s use an app that (5) _____ like a cosmetics-specific, to debate the merits of various common ingredients.

SubQuestionNo:43

Q.43 Select the most appropriate option to fill in blank number 3. Ans

- 1. spend
- 2. cherish
- 3. comply
- 4. propagate

QuestionID:264330164227

Option1ID:264330644146

Option2ID:264330644144

Option3ID:264330644143

Option4ID:264330644145

Status:Answered

ChosenOption: 1

Comprehension:

In the following passage, some words have been deleted. Read the passage carefully and select the most appropriate option to fill in each blank.

South Korea is the most cosmetically (1) _____ country on Earth. Beauty editors estimate that it is because of the government's heavy investment (2) _____ industry. It is ahead of its competitors, and its citizens (3) _____ twice as much on skincare products as consumers in the United States, the UK, and France. Korean shoppers are (4) _____ the world's most discerning. Eight out of 10 Korean women in their 20s and 30s use an app that (5) _____ like a cosmetics-specific, to debate the merits of various common ingredients.

SubQuestionNo:44**Q.44 Select the most appropriate option to fill in blank number 4. Ans**

- ✓ 1. perhaps
- ✗ 2. although
- ✗ 3. maybe
- ✗ 4. though

QuestionID:264330164228

Option1ID:264330644147

Option2ID:264330644148

Option3ID:264330644150

Option4ID:264330644149

Status:Answered

ChosenOption: 3

Comprehension:

In the following passage, some words have been deleted. Read the passage carefully and select the most appropriate option to fill in each blank.

South Korea is the most cosmetically (1) _____ country on Earth. Beauty editors estimate that it is because of the government's heavy investment (2) _____ industry. It is ahead of its competitors, and its citizens (3) _____ twice as much on skincare products as consumers in the United States, the UK, and France. Korean shoppers are (4) _____ the world's most discerning. Eight out of 10 Korean women in their 20s and 30s use an app that (5) _____ like a cosmetics-specific, to debate the merits of various common ingredients.

SubQuestionNo:45**Q.45 Select the most appropriate option to fill in blank number 5. Ans**

- ✗ 1. dissolves
- ✗ 2. stops
- ✗ 3. malfunctions
- ✓ 4. functions

QuestionID:264330164229

Option1ID:264330644153

Option2ID:264330644151

Option3ID:264330644152

Option4ID:264330644154

Status:Answered

ChosenOption: 4

Comprehension:

Read the given passage carefully and answer the questions that follow.

Throughout history, the intricacies of the human mind have been the subject of fascination and inquiry. From ancient philosopher to modern-day neuroscientists, the workings of the brain have been studied and analysed in an attempt to unravel its mysteries. However, despite centuries of research, much remains unknown about the complexities of human cognition and consciousness.

One of the most fascinating aspects of the human mind is its ability to create and imagine. The human mind has the capacity to conceptualise and bring into being ideas that were previously unknown or unimaginable, from artistic expression to scientific discovery. The process of creativity has captured the attention of scholars and laypeople alike and is both enigmatic and awe-inspiring.

There have been many theories proposed to explain the process of creativity. Some suggest that it is a purely subconscious process, while others argue that creativity is a result of conscious effort and intentional problem-solving. Still others suggest that creativity arises from a combination of conscious and subconscious processes.

Despite the ongoing debate over the nature of creativity, one thing is clear: it is a multifaceted and complex phenomenon. Creativity can manifest in a wide range of human activities, from the creation of art and literature to the development of scientific theories and inventions. It can occur in both individual and collective contexts and can be driven by a variety of factors such as curiosity, passion, or the desire for recognition.

Creativity also has the potential to bring about positive change in the world. Throughout history, creative individuals and groups have used their talents to address social, political, and environmental challenges, often inspiring others to take action and make a difference. From the abolitionist movement to the civil rights movement to the environmental movement, creativity has played a crucial role in promoting social justice and positive change.

Despite the many benefits of creativity, it is not without its challenges. The process of creative expression can be fraught with obstacles, from self-doubt and insecurity to external pressures and constraints. Moreover, not all creative ideas are successful or well-received, and many artists and innovators face rejection and criticism as they seek to bring their ideas to fruition.

Despite these challenges, however, the human drive to create and imagine persists.

Individuals and groups continue to harness the power of creativity to make a difference in the world. From the humblest amateur artist to the most celebrated innovator, the human capacity for creativity remains one of our greatest strengths and sources of inspiration.

SubQuestion No: 46

Q.46 Select an appropriate title for the passage. Ans

- 1. The Power of Creativity
- 2. The Complexities of Human Cognition
- 3. The History of the Human Mind
- 4. The Role of the Human Mind in Promoting Positive Change

Question ID: 264330165133

Option 1 ID: 264330647640

Option 2 ID: 264330647642

Option 3 ID: 264330647639

Option 4 ID: 264330647641

Status: Answered

Chosen Option: 1

Comprehension:

Read the given passage carefully and answer the questions that follow.

Throughout history, the intricacies of the human mind have been the subject of fascination and inquiry. From ancient philosopher to modern-day neuroscientists, the workings of the brain have been studied and analysed in an attempt to unravel its mysteries. However, despite centuries of research, much remains unknown about the complexities of human cognition and consciousness.

One of the most fascinating aspects of the human mind is its ability to create and imagine. The human mind has the capacity to conceptualise and bring into being ideas that were previously unknown or unimaginable, from artistic expression to scientific discovery. The process of creativity has captured the attention of scholars and laypeople alike and is both enigmatic and awe-inspiring.

There have been many theories proposed to explain the process of creativity. Some suggest that it is a purely subconscious process, while others argue that creativity is a result of conscious effort and intentional problem-solving. Still others suggest that creativity arises from a combination of conscious and subconscious processes.

Despite the ongoing debate over the nature of creativity, one thing is clear: it is a multifaceted and complex phenomenon. Creativity can manifest in a wide range of human activities, from the creation of art and literature to the development of scientific theories and inventions. It can occur in both individual and collective contexts and can be driven by a variety of factors such as curiosity, passion, or the desire for recognition.

Creativity also has the potential to bring about positive change in the world. Throughout history, creative individuals and groups have used their talents to address social, political, and environmental challenges, often inspiring others to take action and make a difference. From the abolitionist movement to the civil rights movement to the environmental movement, creativity has played a crucial role in promoting social justice and positive change.

Despite the many benefits of creativity, it is not without its challenges. The process of creative expression can be fraught with obstacles, from self-doubt and insecurity to external pressures and constraints. Moreover, not all creative ideas are successful or well-received, and many artists and innovators face rejection and criticism as they seek to bring their ideas to fruition.

Despite these challenges, however, the human drive to create and imagine persists.

Individuals and groups continue to harness the power of creativity to make a difference in the world. From the humblest amateur artist to the most celebrated innovator, the human capacity for creativity remains one of our greatest strengths and sources of inspiration.

SubQuestion No: 47

Q.47 What is the main focus of the passage?

- Ans
- 1. The complexities and challenges of cognitive processes.
 - 2. The mysteries of the human mind.
 - 3. The nature of creativity, its benefits and challenges.
 - 4. The nature of fancy and imagination.

QuestionID: 264330165134

Option1ID: 264330647644

Option2ID: 264330647643

Option3ID: 264330647646

Option4ID: 264330647645

Status: Answered

ChosenOption: 3

Comprehension:

Read the given passage carefully and answer the questions that follow.

Throughout history, the intricacies of the human mind have been the subject of fascination and inquiry. From ancient philosopher to modern-day neuroscientists, the workings of the brain have been studied and analysed in an attempt to unravel its mysteries. However, despite centuries of research, much remains unknown about the complexities of human cognition and consciousness.

One of the most fascinating aspects of the human mind is its ability to create and imagine. The human mind has the capacity to conceptualise and bring into being ideas that were previously unknown or unimaginable, from artistic expression to scientific discovery. The process of creativity has captured the attention of scholars and laypeople alike and is both enigmatic and awe-inspiring.

There have been many theories proposed to explain the process of creativity. Some suggest that it is a purely subconscious process, while others argue that creativity is a result of conscious effort and intentional problem-solving. Still others suggest that creativity arises from a combination of conscious and subconscious processes.

Despite the ongoing debate over the nature of creativity, one thing is clear: it is a multifaceted and complex phenomenon. Creativity can manifest in a wide range of human activities, from the creation of art and literature to the development of scientific theories and inventions. It can occur in both individual and collective contexts and can be driven by a variety of factors such as curiosity, passion, or the desire for recognition.

Creativity also has the potential to bring about positive change in the world. Throughout history, creative individuals and groups have used their talents to address social, political, and environmental challenges, often inspiring others to take action and make a difference. From the abolitionist movement to the civil rights movement to the environmental movement, creativity has played a crucial role in promoting social justice and positive change.

Despite the many benefits of creativity, it is not without its challenges. The process of creative expression can be fraught with obstacles, from self-doubt and insecurity to external pressures and constraints. Moreover, not all creative ideas are successful or well-received, and many artists and innovators face rejection and criticism as they seek to bring their ideas to fruition.

Despite these challenges, however, the human drive to create and imagine persists.

Individuals and groups continue to harness the power of creativity to make a difference in the world. From the humblest amateur artist to the most celebrated innovator, the human capacity for creativity remains one of our greatest strengths and sources of inspiration.

SubQuestion No: 48

Q.48 Which of the following factors can drive creativity? Ans

- 1. Self-doubt and insecurity
- 2. Curiosity and passion
- 3. Fancy and imagination
- 4. External pressures and constraints

QuestionID:264330165135

Option1ID:264330647647

Option2ID:264330647649

Option3ID:264330647650

Option4ID:264330647648

Status:Not Answered

ChosenOption:--

Comprehension:

Read the given passage carefully and answer the questions that follow.

Throughout history, the intricacies of the human mind have been the subject of fascination and inquiry. From ancient philosopher to modern-day neuroscientists, the workings of the brain have been studied and analysed in an attempt to unravel its mysteries. However, despite centuries of research, much remains unknown about the complexities of human cognition and consciousness.

One of the most fascinating aspects of the human mind is its ability to create and imagine. The human mind has the capacity to conceptualise and bring into being ideas that were previously unknown or unimaginable, from artistic expression to scientific discovery. The process of creativity has captured the attention of scholars and laypeople alike and is both enigmatic and awe-inspiring.

There have been many theories proposed to explain the process of creativity. Some suggest that it is a purely subconscious process, while others argue that creativity is a result of conscious effort and intentional problem-solving. Still others suggest that creativity arises from a combination of conscious and subconscious processes.

Despite the ongoing debate over the nature of creativity, one thing is clear: it is a multifaceted and complex phenomenon. Creativity can manifest in a wide range of human activities, from the creation of art and literature to the development of scientific theories and inventions. It can occur in both individual and collective contexts and can be driven by a variety of factors such as curiosity, passion, or the desire for recognition.

Creativity also has the potential to bring about positive change in the world. Throughout history, creative individuals and groups have used their talents to address social, political, and environmental challenges, often inspiring others to take action and make a difference. From the abolitionist movement to the civil rights movement to the environmental movement, creativity has played a crucial role in promoting social justice and positive change.

Despite the many benefits of creativity, it is not without its challenges. The process of creative expression can be fraught with obstacles, from self-doubt and insecurity to external pressures and constraints. Moreover, not all creative ideas are successful or well-received, and many artists and innovators face rejection and criticism as they seek to bring their ideas to fruition.

Despite these challenges, however, the human drive to create and imagine persists.

Individuals and groups continue to harness the power of creativity to make a difference in the world. From the humblest amateur artist to the most celebrated innovator, the human capacity for creativity remains one of our greatest strengths and sources of inspiration.

Sub Question No: 49

Q.49 According to the passage, what is one of the challenges of creative expression? Ans

- 1. The absence of external pressures and constraints.
- 2. The limited capacity of the human mind.
- 3. The lack of appreciation for creative ideas.
- 4. The overemphasis on conscious problem-solving.

Question ID: 264330165136

Option 1 ID: 264330647654

Option 2 ID: 264330647652

Option 3 ID: 264330647651

Option 4 ID: 264330647653

Status: Not Answered

Chosen Option: --

Comprehension:

Read the given passage carefully and answer the questions that follow.

Throughout history, the intricacies of the human mind have been the subject of fascination and inquiry. From ancient philosopher to modern-day neuroscientists, the workings of the brain have been studied and analysed in an attempt to unravel its mysteries. However, despite centuries of research, much remains unknown about the complexities of human cognition and consciousness.

One of the most fascinating aspects of the human mind is its ability to create and imagine. The human mind has the capacity to conceptualise and bring into being ideas that were previously unknown or unimaginable, from artistic expression to scientific discovery. The process of creativity has captured the attention of scholars and laypeople alike and is both enigmatic and awe-inspiring.

There have been many theories proposed to explain the process of creativity. Some suggest that it is a purely subconscious process, while others argue that creativity is a result of conscious effort and intentional problem-solving. Still others suggest that creativity arises from a combination of conscious and subconscious processes.

Despite the ongoing debate over the nature of creativity, one thing is clear: it is a multifaceted and complex phenomenon. Creativity can manifest in a wide range of human activities, from the creation of art and literature to the development of scientific theories and inventions. It can occur in both individual and collective contexts and can be driven by a variety of factors such as curiosity, passion, or the desire for recognition.

Creativity also has the potential to bring about positive change in the world. Throughout history, creative individuals and groups have used their talents to address social, political, and environmental challenges, often inspiring others to take action and make a difference. From the abolitionist movement to the civil rights movement to the environmental movement, creativity has played a crucial role in promoting social justice and positive change.

Despite the many benefits of creativity, it is not without its challenges. The process of creative expression can be fraught with obstacles, from self-doubt and insecurity to external pressures and constraints. Moreover, not all creative ideas are successful or well-received, and many artists and innovators face rejection and criticism as they seek to bring their ideas to fruition.

Despite these challenges, however, the human drive to create and imagine persists.

Individuals and groups continue to harness the power of creativity to make a difference in the world. From the humblest amateur artist to the most celebrated innovator, the human capacity for creativity remains one of our greatest strengths and sources of inspiration.

SubQuestion No: 50

Q.50 Select the most appropriate ANTONYM for the word 'fraught'. Ans

1. Tranquil

2. Calm

3. Beset

4. Devoid

QuestionID:264330165137

Option1ID:264330647656

Option2ID:264330647658

Option3ID:264330647655

Option4ID:264330647657

Status:Not Answered

ChosenOption:--