

SSCCPOOct04,2023Shift1QuestionPaper

Sub Inspector in Delhi Police and Central Armed Police Forces Examination 2023 Paper I

Roll Number	
Candidate Name	
Venue Name	
Exam Date	04/10/2023
Exam Time	9:00AM-11:00AM
Subject	SICPO Paper I 2023

Section: General Intelligence and Reasoning

Three of the following letter-clusters are alike in some manner and one is different. Select the one that is different.

- Ans
- 1. NQST
 - 2. GTHS
 - 3. PSUV
 - 4. SVXY

QuestionID:264330145349
Option1ID:264330569653
Option2ID:264330569654
Option3ID:264330569652
Option4ID:264330569651
Status: Answered
ChosenOption: 2

Three statements are given followed by three conclusions numbered I, II and III. Assuming the statements to be true, even if they seem to be at variance with commonly known facts, decide which of the conclusions logically follow(s) from the statements.

Statements:
Some elephants are fishes.
No fish is a tiger.
All deer are tigers.

Conclusions:
I. Some elephants are deer.
II. No elephant is a tiger.
III. No deer is a fish.

- Ans
- 1. Only conclusion III follows.
 - 2. Both conclusions I and III follow.
 - 3. Both conclusions I and II follow.
 - 4. Only conclusion II follows.

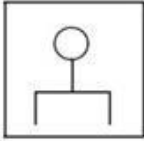
QuestionID:264330145343
Option1ID:264330569630
Option2ID:264330569628
Option3ID:264330569627
Option4ID:264330569629
Status: Answered
ChosenOption: 1

Q.3 Select the figure that will come next (?) in the following series.

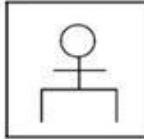


Ans

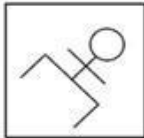
✗ 1.



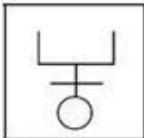
✗ 2.



✗ 3.



✓ 4.



QuestionID:26433082667

Option1ID:264330324504

Option2ID:264330324503

Option3ID:264330324501

Option4ID:264330324502

Status: Answered

ChosenOption: 4

Q.4 Six friends are sitting in a circle. All of them are facing the centre. Kanak sits third to the right of Sona. Kapil is an immediate neighbour of Mani. Goldy sits second to the right of Mani. Sona is an immediate neighbour of Kapil and Suresh. Whose sits second to the left of Kanak?

Ans ✗ 1. Suresh

✓ 2. Kapil

✗ 3. Goldy

✗ 4. Mani

QuestionID:264330145406

Option1ID:264330569879

Option2ID:264330569880

Option3ID:264330569882

Option4ID:264330569881

Status: Answered

ChosenOption: 2

Q.5 In this question, three statements are given, followed by two conclusions numbered I and II. Assuming the statements to be true, even if they seem to be at variance with commonly known facts, decide which of the conclusions logically follows/follow from the statements.

Statements:

I. All buildings are towers.

II. No tower is a shop.

III. Some shops are offices.

Conclusions:

I. Some offices are towers.

II. No building is a shop.

- Ans
- 1. Both conclusions I and II follow
 - 2. Only conclusion I follows
 - 3. Only conclusion II follows
 - 4. Neither conclusion I nor II follows

QuestionID:264330104078

Option1ID:264330408615

Option2ID:264330408613

Option3ID:264330408614

Option4ID:264330408616

Status:Answered

ChosenOption: 3

Q.6 Which of the following numbers will replace the question mark (?) in the given series? 239, 274, 309, 354, 399, 454, ?

- Ans
- 1. 499
 - 2. 474
 - 3. 539
 - 4. 509

QuestionID:26433067874

Option1ID:264330266011

Option2ID:264330266009

Option3ID:264330266008

Option4ID:264330266010

Status:Answered

ChosenOption: 1

Q.7 If '+' means '-', '-' means 'x', 'x' means '+' and '÷' means '+', what will come in place of '?' in the following equation?

$$36-5\div 240\times 6+17=?$$

- Ans
- 1. 218
 - 2. 221
 - 3. 203
 - 4. 237

QuestionID:264330101144

Option1ID:264330397122

Option2ID:264330397121

Option3ID:264330397124

Option4ID:264330397123

Status:Answered

ChosenOption: 3

Q.8 If A, B, C, D and E denote +, ×, ÷ and =, respectively, then which of the following options is correct?

- Ans 1. 4A9C6D2E40A9
 2. 4A9C6D2B40E9
 3. 4A9C6D2E40B9
 4. 4A9E6D2C40B9

QuestionID:26433057353

Option1ID:264330224396

Option2ID:264330224397

Option3ID:264330224399

Option4ID:264330224398

Status:Answered

ChosenOption: 2

Q.9 Which of the following numbers will replace the question mark (?) in the given series? 25, 26, 28, 32, 40, ?

- Ans 1. 50
 2. 56
 3. 58
 4. 52

QuestionID:26433057326

Option1ID:264330224289

Option2ID:264330224290

Option3ID:264330224291

Option4ID:264330224288

Status:Answered

ChosenOption: 2

Q.10 Which letter-cluster will replace the question mark (?) to complete the given series? VQSN, ?, ROOL, PNMK, NMKJ

- Ans 1. PQMN
 2. TPQM
 3. PTMQ
 4. TQRN

QuestionID:264330180760

Option1ID:264330709010

Option2ID:264330709009

Option3ID:264330709008

Option4ID:264330709007

Status:Answered

ChosenOption: 2

Q.11 If '+' means 'x', 'x' means '-', '-' means '÷' and '÷' means '+', then what will come in place of the (?) in the following equation?
 $9+3\div 2\times 135-15=?$

- Ans
- 1. 22
 - 2. 25
 - 3. 18.5
 - 4. 20

QuestionID:264330114255
Option1ID:264330449107
Option2ID:264330449108
Option3ID:264330449106
Option4ID:264330449105
Status:Answered
ChosenOption: 4

Q.12 Select the correct option that indicates the arrangement of the given words in the order in which they appear in an English dictionary.

1. Realistic
2. Readily
3. Reach
4. Really
5. Reactor
6. Realize

- Ans
- 1.3,5,1,2,6,4
 - 2.3,5,2,1,6,4
 - 3.3,2,6,1,5,4
 - 4.3,5,6,1,2,4

QuestionID:264330145383
Option1ID:264330569790
Option2ID:264330569787
Option3ID:264330569789
Option4ID:264330569788
Status:Answered
ChosenOption: 2

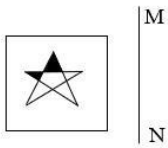
Q.13 Select the option that is related to the third word in the same way as the second word is related to the first word.
(The words must be considered as meaningful words and must not be related to each other based on the number of letters/number of consonants/vowels in the word.)

Derive:Infer::Urge:?

- Ans
- 1. Protest
 - 2. Hinder
 - 3. Censure
 - 4. Exhort

QuestionID:264330145398
Option1ID:264330569848
Option2ID:264330569850
Option3ID:264330569847
Option4ID:264330569849
Status:Answered
ChosenOption: 4

Q.14 Select the correct mirror image of the given figure when the mirror is placed at line MN as shown.



Ans


X1.



X2.



✓3.



X4.



QuestionID:26433056625

Option1ID:264330221485

Option2ID:264330221484

Option3ID:264330221486

Option4ID:264330221487

Status:Answered

ChosenOption: 3

Q.15 'D @ G' means 'D is the father of G',
'D#G' means 'D is the daughter of G',
'D*G' means 'D is the mother of G', and 'D - G' means 'D is the husband of G'.
If A-Q*B@R, how is A related to R?

Ans X1. Father

X2. Husband

X3. Son

✓4. Father's father

QuestionID:264330126661

Option1ID:264330496319

Option2ID:264330496316

Option3ID:264330496317

Option4ID:264330496318

Status:Answered

ChosenOption: 4

Q.16 If A denotes '+', B denotes 'x', C denotes '-', and D denotes '÷', then what will come in place of '?' in the following equation?
 $145A27D3B?=163$

- Ans
- 1. 1
 - 2. 2
 - 3. 3
 - 4. 6

QuestionID:26433067673

Option1ID:264330265204

Option2ID:264330265206

Option3ID:264330265207

Option4ID:264330265205

Status:Answered

ChosenOption: 2

Q.17 In a certain code language, 'LIFE' is coded as '9351' and 'NEAR' is coded as '4692'. What is the code for 'E' in the given code language?

- Ans
- 1. 3
 - 2. 4
 - 3. 1
 - 4. 9

QuestionID:264330169657

Option1ID:264330665329

Option2ID:264330665328

Option3ID:264330665330

Option4ID:264330665327

Status:Answered

ChosenOption: 4

Q.18 If '+' means '-', '-' means 'x', 'x' means '+', and '÷' means '+', then what will come in place of the question mark (?) in the following equation?
 $124x4÷13-3+36=?$

- Ans
- 1. 31
 - 2. 34
 - 3. 45
 - 4. 42

QuestionID:264330126059

Option1ID:264330493909

Option2ID:264330493911

Option3ID:264330493908

Option4ID:264330493910

Status:Answered

ChosenOption: 2

Q.19 Select the correct mirror image of the given figure when the mirror is placed at MN as shown below



Ans

1. BK\$6GHX

2. BK\$6GHR

3. XH\$6GHX

4. BK\$6GHX

QuestionID:26433085400

Option1ID:264330335302

Option2ID:264330335304

Option3ID:264330335303

Option4ID:264330335301

Status:Answered

ChosenOption: 3

Q.20 In a certain code language, 'FIRE' is coded as '7391' and 'AGED' is coded as '8247'. What is the code for 'E' in the given code language?

Ans 1. 2

2. 7

3. 4

4. 3

QuestionID:264330169658

Option1ID:264330665333

Option2ID:264330665332

Option3ID:264330665334

Option4ID:264330665331

Status:Answered

ChosenOption: 2

Q.21 A man is standing in the park facing North. He turns to 90° towards the left and walks 40 km. He again takes a 90° turn towards the right and walks 50 km. He takes the next 90° turn towards the right and walks 60 km. Lastly, he takes 90° turn towards the right and walks 50 km. How much distance is he from the starting point?

Ans 1. 40km

2. 60km

3. 50km

4. 20km

QuestionID:26433093124

Option1ID:264330365749

Option2ID:264330365752

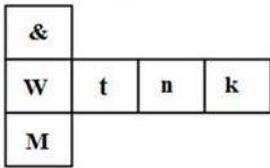
Option3ID:264330365750

Option4ID:264330365751

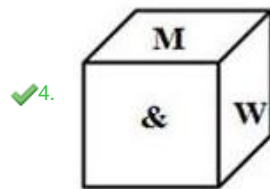
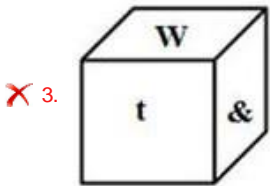
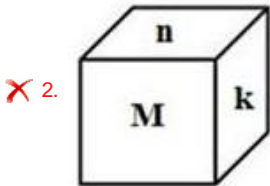
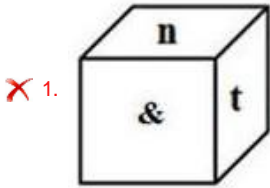
Status:Answered

ChosenOption: 4

Q.22 If the given sheet is folded to form a cube, which of the following figures is NOT possible?



Ans



QuestionID:26433059914
 Option1ID:264330234491
 Option2ID:264330234490
 Option3ID:264330234489
 Option4ID:264330234488
 Status:Answered
 ChosenOption: 4

Q.23 Two statements are given, followed by two conclusions numbered I and II. Assuming the statements to be true, even if they seem to be at variance with commonly known facts, decide which of the conclusions logically follow(s) from the statements. Statements:

All cars are vehicles.
 All vehicles are trucks.

Conclusions:

- I) All cars are trucks.
- II) All trucks are vehicles.

Ans ✗ 1. Neither Conclusion I nor II follows.

✓ 2. Only Conclusion I follows.

✗ 3. Only Conclusion II follows.

✗ 4. Both Conclusions I and II follow.

QuestionID:26433067701
 Option1ID:264330265319
 Option2ID:264330265316
 Option3ID:264330265317
 Option4ID:264330265318
 Status:Answered
 ChosenOption: 2

Q.24 Select the option that represents the letters which, when sequentially placed from left to right in the blanks below, will complete the letter series.

P _ H _ CE_ZP_EH_ Ans

1. H Z C Z P E C

2. CEZPHCZ

3. ZCHPZCE

4. EPZCHEC

QuestionID:26433086954

Option1ID:264330341459

Option2ID:264330341458

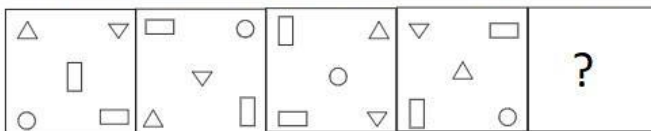
Option3ID:264330341457

Option4ID:264330341460

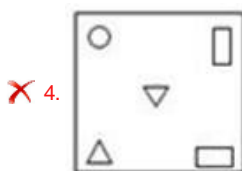
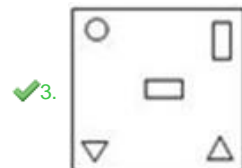
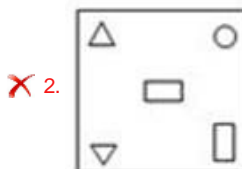
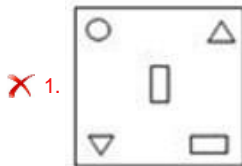
Status: Answered

ChosenOption: 2

Q.25 Select the figure that will replace the question mark (?) in the following figure series.



Ans



QuestionID:264330145493

Option1ID:264330570228

Option2ID:264330570229

Option3ID:264330570227

Option4ID:264330570230

Status: Answered

ChosenOption: 3

Q.26 Select the set in which the number are related in the same way as the numbers of the given sets. (NOTE : Operations should be performed on the whole numbers, without breaking down the numbers into its constituent digits. E.g. 13 – Operations on 13 such as adding/subtracting/multiplying etc. to 13 can be performed. Breaking down 13 into 1 and 3 and then performing mathematical operations on 1 and 3 is not allowed.)
(13,14,54)
(15,18,66)

- Ans
- 1. (11, 13, 52)
 - 2. (15, 17, 66)
 - 3. (13, 19, 64)
 - 4. (12, 34, 90)

QuestionID:26433069109
Option1ID:264330270951
Option2ID:264330270950
Option3ID:264330270948
Option4ID:264330270949
Status:Answered
ChosenOption: 3

Q.27 Select the number from among the given options that can replace the question mark (?) in the following series.
61,95,138,197,279,?

- Ans
- 1. 397
 - 2. 389
 - 3. 391
 - 4. 395

QuestionID:26433057050
Option1ID:264330223186
Option2ID:264330223185
Option3ID:264330223184
Option4ID:264330223187
Status:Answered
ChosenOption: 3

Q.28 Which letter-cluster will replace the question mark (?) to complete the given series? GOWB, MVEK, SCMT, ?, EQCL

- Ans
- 1. YJUC
 - 2. YJCU
 - 3. YKUC
 - 4. YKCU

QuestionID:26433040788
Option1ID:264330159629
Option2ID:264330159627
Option3ID:264330159630
Option4ID:264330159628
Status:Answered
ChosenOption: 1

Q.29 Select the set in which the numbers are related in the same way as are the numbers of the following set.

(NOTE : Operations should be performed on the whole numbers, without breaking down the numbers into its constituent digits. E.g. 13 – Operations on 13 such as adding/subtracting/multiplying etc. to 13 can be performed. Breaking down 13 into 1 and 3 and then performing mathematical operations on 1 and 3 is NOT allowed)

(21,5,120)
(2,7,8)

- Ans 1. (3,4,10)
 2. (3,4,16)
 3. (2,6,21)
 4. (4,7,34)

QuestionID:264330145329
Option1ID:264330569573
Option2ID:264330569571
Option3ID:264330569574
Option4ID:264330569572
Status:Answered
ChosenOption: 4

Q.30 Select the option that is related to the third term in the same way as the second term is related to the first term and the sixth term is related to the fifth term.
142:108::185:?:169:135

- Ans 1. 157
 2. 148
 3. 151
 4. 162

QuestionID:26433079157
Option1ID:264330310635
Option2ID:264330310632
Option3ID:264330310633
Option4ID:264330310634
Status:Answered
ChosenOption: 3

Q.31 In a certain code language, 'TRAUMA' is coded as '36' and 'STIL' is coded as '24'. How will 'OBEIDEINT' be coded in that language?

- Ans 1. 54
 2. 84
 3. 44
 4. 72

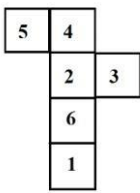
QuestionID:26433079049
Option1ID:264330310201
Option2ID:264330310203
Option3ID:264330310200
Option4ID:264330310202
Status:Answered
ChosenOption: 1

Q.32 Which of the following numbers will replace the question mark (?) in the given series? 352, 326, 284, 225, 148, ?

- Ans 1. 71
 2. 54
 3. 52
 4. 50

QuestionID:26433069399
Option1ID:264330272109
Option2ID:264330272110
Option3ID:264330272108
Option4ID:264330272111
Status:Answered
ChosenOption: 3

Q.33 A cube is made by folding the given sheet. In the cube so formed, what would be the number on the opposite side of the number '1'?



- Ans 1. 2
 2. 5
 3. 3
 4. 4

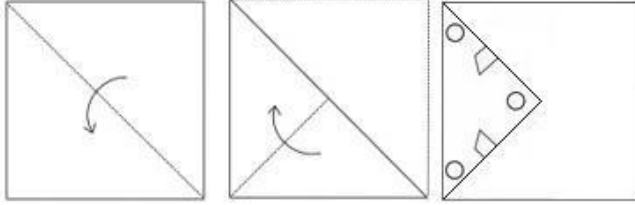
QuestionID:26433065676
Option1ID:264330257266
Option2ID:264330257264
Option3ID:264330257267
Option4ID:264330257265
Status:Answered
ChosenOption: 1

Q.34 Four letter-clusters have been given, out of which three are alike in some manner and one is different. Select the odd letter-cluster.

- Ans 1. ZSNK
 2. VOJG
 3. WNDD
 4. TMHE

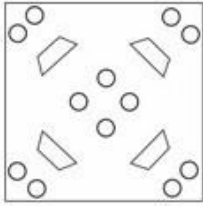
QuestionID:264330180757
Option1ID:264330708995
Option2ID:264330708998
Option3ID:264330708997
Option4ID:264330708996
Status:Answered
ChosenOption: 3

Q.35 A paper is folded and cut as shown. How will it appear when unfolded?

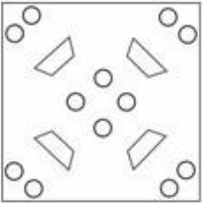


Ans

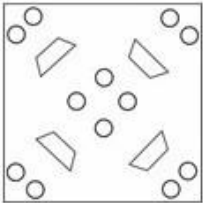
✓1.



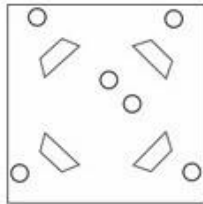
✗2.



✗3.



✗4.



QuestionID:26433040795

Option1ID:264330159655

Option2ID:264330159656

Option3ID:264330159657

Option4ID:264330159658

Status: Answered

ChosenOption: 1

Q.36 Select the set in which the numbers are related in the same way as are the numbers of the following sets.

(NOTE : Operations should be performed on the whole numbers, without breaking down the numbers into its constituent digits. E.g. 13 – Operations on 13 such as adding/subtracting/multiplying etc. to 13 can be performed. Breaking down 13 into 1 and 3 and then performing mathematical operations on 1 and 3 is NOT allowed)

(329,145,184),(567,221,346)

Ans 1.(308,205,192)

2.(506,302,224)

3.(676,225,451)

4.(464,264,206)

QuestionID:264330145297

Option1ID:264330569446

Option2ID:264330569445

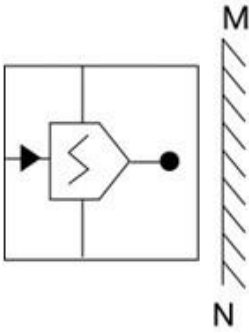
Option3ID:264330569443

Option4ID:264330569444

Status:Answered

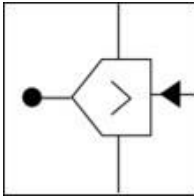
ChosenOption: 3

Q.37 Select the correct mirror image of the given combination when the mirror is placed at 'MN' as shown below.

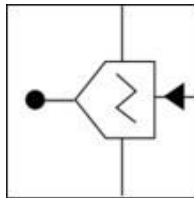


Ans

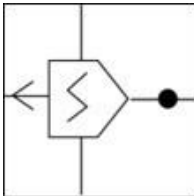
X1.



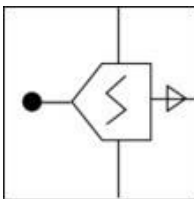
✓2.



X3.



X4.



QuestionID:264330130776

Option1ID:264330512218

Option2ID:264330512217

Option3ID:264330512216

Option4ID:264330512215

Status:Answered

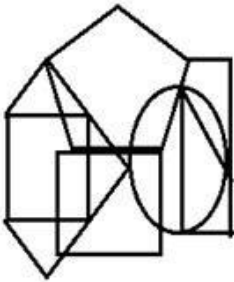
ChosenOption: 2

Q.38 Seven people, A, B, C, D, E, F and G, are sitting in a straight row, facing north (not necessarily in the same order). Only 2 people sit to the right of D. G is an immediate neighbour of D. Only 3 people sit between A and G. Only 2 people sit between B and C. E is not an immediate neighbour of C. F sits to the immediate right of G. How many people sit between E and D?

- Ans
- 1. 0
 - 2. 1
 - 3. 3
 - 4. 2

QuestionID:264330145409
 Option1ID:264330569891
 Option2ID:264330569892
 Option3ID:264330569894
 Option4ID:264330569893
 Status:Answered
 ChosenOption: 2

Q.39 Select the option figure which is embedded in the given figure as its part (rotation is NOT allowed).



Ans

- 1.
- 2.
- 3.
- 4.

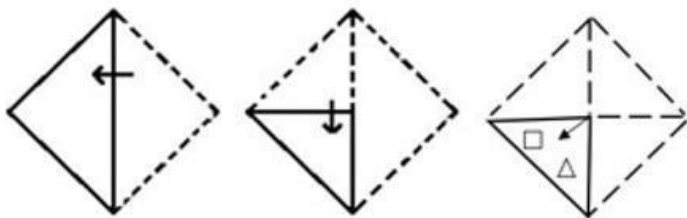
QuestionID:264330145463
 Option1ID:264330570110
 Option2ID:264330570108
 Option3ID:264330570107
 Option4ID:264330570109
 Status:Answered
 ChosenOption: 4

Q.40 Biswest of E. A is north-west of B. F is north-east of B. D is south-east of F, such that F is north-west of E and D is south-east of E as well. If C is south-west of E, what is the position of A with respect to E? (All positions are arranged in GRID pattern)

- Ans
- 1. South-east
 - 2. North-east
 - 3. South-west
 - 4. North-west

QuestionID:26433068364
 Option1ID:264330267968
 Option2ID:264330267971
 Option3ID:264330267970
 Option4ID:264330267969
 Status:Answered
 ChosenOption: 4

Q.41 A paper is folded and cut as shown. How will it appear when unfolded?



Ans

- 1.
- 2.
- 3.
- 4.

QuestionID:26433068732
 Option1ID:264330269443
 Option2ID:264330269440
 Option3ID:264330269441
 Option4ID:264330269442
 Status:Answered
 ChosenOption: 4

Q.42 In a certain code language, 'ASIA' is written as 'ZHRZ' and 'IRELAND' is written as 'RIVOZMW'. How will 'NORWAY' be written in that language?

- Ans
- 1. NLISZB
 - 2. MLIDZB
 - 3. NJIDZB
 - 4. MJIDZB

QuestionID:26433079050

Option1ID:264330310207

Option2ID:264330310205

Option3ID:264330310204

Option4ID:264330310206

Status:Answered

ChosenOption: 2

Q.43 If '+' means '-', '-' means 'x', 'x' means '+', and '÷' means '+', then what will come in place of the question mark (?) in the following equation?
 $61 \div 9 \times 3 - 8 + 5 = ?$

- Ans
- 1. 80
 - 2. 75
 - 3. 89
 - 4. 72

QuestionID:264330126055

Option1ID:264330493894

Option2ID:264330493895

Option3ID:264330493893

Option4ID:264330493892

Status:Answered

ChosenOption: 1

Q.44 Given below are two statements and two conclusions. Take the statements to be true even if they are at variance with commonly known facts, and decide whether the conclusion(s) follow(s) the given statements.

Statements:
Some rats are mats.
All mats are ants.

Conclusions:
I. Some rats are ants.
II. Some ants are mats.

- Ans
- 1. Both the conclusions follow
 - 2. Neither conclusion I nor II follows
 - 3. Only conclusion II follows
 - 4. Only conclusion I follows

QuestionID:26433056645

Option1ID:264330221566

Option2ID:264330221567

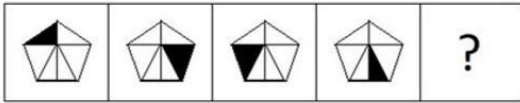
Option3ID:264330221565

Option4ID:264330221564

Status:Answered

ChosenOption: 1

Q.45 Select the figure from among the given options that can replace the question mark (?) in the following series.



Ans

✗ 1.



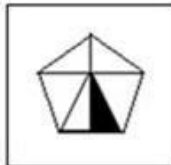
✓ 2.



✗ 3.



✗ 4.



QuestionID:26433087166

Option1ID:264330342303

Option2ID:264330342304

Option3ID:264330342301

Option4ID:264330342302

Status: Answered

ChosenOption: 2

Q.46 Which two signs should be interchanged to make the given equation correct? $114 \div$

$$85 + 5 \times 4 - 33 = 149$$

Ans ✓ 1. ÷ and +

✗ 2. ÷ and -

✗ 3. + and ×

✗ 4. - and +

QuestionID:264330129523

Option1ID:264330507459

Option2ID:264330507458

Option3ID:264330507461

Option4ID:264330507460

Status: Answered

ChosenOption: 1

Q.47 In a certain code language, 'good morning' is coded as 'mudu', 'early morning tea' is coded as 'dutuse', 'te' is early' is coded as 'seretu'. What is the code for the word 'is'?

- Ans
- 1. mu
 - 2. tu
 - 3. du
 - 4. re

QuestionID:26433074766

Option1ID:264330293154

Option2ID:264330293155

Option3ID:264330293152

Option4ID:264330293153

Status:Answered

ChosenOption: 4

Q.48 Select the option that represents the correct order of the given words as they would appear in an English dictionary?

1. Voice
2. Vocalist
3. Vivisection
4. Void
5. Vogue

- Ans
- 1.3,2,5,1,4
 - 2.5,2,3,1,4
 - 3.2,3,5,1,4
 - 4.4,2,3,1,5

QuestionID:26433067244

Option1ID:264330263489

Option2ID:264330263488

Option3ID:264330263490

Option4ID:264330263491

Status:Answered

ChosenOption: 1

Q.49 'A?B' means 'A is the son of B'.
'A\$B' means 'A is the daughter of B'. 'A * B' means 'A is the brother of B'. 'A = B' means 'A is the father of B'.
If H\$Q*Y*N, then how is Y related to H?

- Ans
- 1. Father
 - 2. Brother
 - 3. Father's brother
 - 4. Father's father

QuestionID:264330145388

Option1ID:264330569807

Option2ID:264330569809

Option3ID:264330569810

Option4ID:264330569808

Status:Answered

ChosenOption: 3

Q.50 Select the option that is related to the third word in the same way as the second word is related to the first word. (The words must be considered as meaningful words and must not be related to each other based on the number of letters/number of consonants/vowels in the word.)
Wrestling: Arena :: Ice-Skating: ?

- Ans
- 1. Track
 - 2. Rink
 - 3. Stadium
 - 4. Ground

QuestionID:26433091601
Option1ID:264330359771
Option2ID:264330359770
Option3ID:264330359772
Option4ID:264330359769
Status:Answered
ChosenOption: 2

Section:General Knowledge and General Awareness

The Karewa formations are found in the _____.

- Ans
- 1. North Eastern Hills
 - 2. Terai Region
 - 3. Uttaranchal Himalayas
 - 4. Kashmir Himalayas

QuestionID:264330119795
Option1ID:264330469458
Option2ID:264330469457
Option3ID:264330469456
Option4ID:264330469455
Status:Not Answered
ChosenOption:--

In which part of the Constitution are fundamental duties added? Ans

- 1. Part III-B
- 2. Part II-B
- 3. Part I-A
- 4. Part IV-A

QuestionID:264330116390
Option1ID:264330457647
Option2ID:264330457646
Option3ID:264330457645
Option4ID:264330457648
Status:Answered
ChosenOption: 4

Who among the following applied European theatrical techniques to Indian Classical dance with folk and tribal dance?

- Ans
- 1. Guru Bipin Singh
 - 2. Uday Shankar
 - 3. Birju Maharaj
 - 4. Kelucharan Mohapatra

QuestionID:264330145163
Option1ID:264330568910
Option2ID:264330568909
Option3ID:264330568908
Option4ID:264330568907
Status:Answered
ChosenOption: 2

Q.4 Ravana Phad cave and Durga Temple at Aihole portray the architectural style of which dynasty?

- Ans
- 1. Chalukya
 - 2. Pallava
 - 3. Hoysala
 - 4. Vijaynagara

QuestionID:264330141826
Option1ID:264330555623
Option2ID:264330555625
Option3ID:264330555624
Option4ID:264330555626
Status:Not Answered
ChosenOption:--

Q.5 Read the given statements and select the correct option.

- i) The Governor is the real head of the State Government.
- ii) The Chief Minister plays a key role in framing the laws and policies of the state government.
- iii) Governor of a State is appointed by the President.

- Ans
- 1. Both i and ii
 - 2. Only ii
 - 3. Both ii and iii
 - 4. Only i

QuestionID:264330158695
Option1ID:264330622141
Option2ID:264330622140
Option3ID:264330622142
Option4ID:264330622139
Status:Answered
ChosenOption: 3

Q.6 What do you call the drug that binds to the receptor site and inhibits its natural function?

- Ans 1. Antagonists
 2. Depressants
 3. Antidepressants
 4. Agonist

QuestionID:264330145208
Option1ID:264330569088
Option2ID:264330569087
Option3ID:264330569090
Option4ID:264330569089
Status:NotAnswered
ChosenOption:--

Q.7 What is the dimension of the kabaddi play field for men? Ans

1. 14 m x 10 m
 2. 14m x 8m
 3. 12.50m x 10m
 4. 13m x 10m

QuestionID:264330118471
Option1ID:264330465288
Option2ID:264330465287
Option3ID:264330465285
Option4ID:264330465286
Status:Answered
ChosenOption: 2

Q.8 In which year did the Ministry of Health and Family Welfare of India launch the Weekly Iron and Folic Acid Supplementation (WIFS) program to meet the challenge of high prevalence and incidence of anaemia among adolescent girls and boys (56% girls and 30% boys)?

- Ans 1. 2013
 2. 2011
 3. 2014
 4. 2012

QuestionID:264330145199
Option1ID:264330569053
Option2ID:264330569051
Option3ID:264330569054
Option4ID:264330569052
Status:NotAnswered
ChosenOption:--

Q.9 Who among the following was the successor of Mughal emperor Shah Jahan to the throne?

- Ans
- 1. Shah Shuja
 - 2. Aurangzeb
 - 3. Murad Baksh
 - 4. Dara Shikoh

QuestionID:26433054201
Option1ID:264330211789
Option2ID:264330211791
Option3ID:264330211788
Option4ID:264330211790
Status:Answered
ChosenOption: 4

Q.10 Who is the ex-officio Chairman of the Rajya Sabha? Ans

- 1. Vice President
- 2. Prime Minister
- 3. President
- 4. Attorney General of India

QuestionID:264330113417
Option1ID:264330445755
Option2ID:264330445754
Option3ID:264330445753
Option4ID:264330445756
Status:Answered
ChosenOption: 1

Q.11 What is the full form of RIDF?

- Ans
- 1. Rural Infrastructure Development Forum
 - 2. Road Infrastructure Development Fund
 - 3. Rural Infrastructure Development Fund
 - 4. Rural Industries Development Fund

QuestionID:264330112515
Option1ID:264330442146
Option2ID:264330442145
Option3ID:264330442148
Option4ID:264330442147
Status:Answered
ChosenOption: 3

Q.12 Tansen, the music legend, was a courtier in which of the following courts before coming to Akbar?

- Ans
- 1. Benaras
 - 2. Gandhara
 - 3. Rewa
 - 4. Maghad

QuestionID:264330145170
Option1ID:264330568937
Option2ID:264330568938
Option3ID:264330568936
Option4ID:264330568935
Status:Not Answered
ChosenOption:--

Q.13 How many fundamental rights were provided originally by the Indian Constitution in 1950?

Ans 1. Seven

2. Six

3. Nine

4. Five

QuestionID:264330113393

Option1ID:264330445658

Option2ID:264330445657

Option3ID:264330445659

Option4ID:264330445660

Status:Answered

ChosenOption: 1

Q.14 The five-year plans in India laid down not only specific objectives to be attained in the five years of a plan, but also what was to be achieved over a period of 20 years. This long-term plan is called a _____.

Ans 1. perspective plan

2. twenty-year plan

3. two-decade plan

4. perpetual plan

QuestionID:264330168853

Option1ID:264330662225

Option2ID:264330662223

Option3ID:264330662224

Option4ID:264330662226

Status:Answered

ChosenOption: 3

Q.15 Who among the following is the author of the book 'On Writing: A Memoir of the Craft'?

Ans 1. F. Scott Fitzgerald

2. Ernest Hemingway

3. Stephen King

4. Clive Staples Lewis

QuestionID:26433071470

Option1ID:264330280307

Option2ID:264330280306

Option3ID:264330280305

Option4ID:264330280304

Status:Not Answered

ChosenOption:--

Q.16 What was the target growth rate of the Indian economy in the second five-year plan? Ans

- 1. 6.7%
- 2. 2.8%
- 3. 5.4%
- 4. 4.5%

QuestionID:264330145230
Option1ID:264330569176
Option2ID:264330569175
Option3ID:264330569178
Option4ID:264330569177
Status:Answered
ChosenOption: 3

Q.17 Who among the following was the first president of IOC? Ans

- 1. Lord Killanin
- 2. Pierre, BarondeCoubertin
- 3. DemetriusVikelas
- 4. AveryBrundage

QuestionID:26433059387
Option1ID:264330232417
Option2ID:264330232416
Option3ID:264330232418
Option4ID:264330232419
Status:NotAnswered
ChosenOption:--

Q.18 In which process is a solid substance volatilised by heating and the vapour is condensed back to the solid at a cold surface?

- Ans
- 1. Chromatography
 - 2. Filtration
 - 3. Distillation
 - 4. Sublimation

QuestionID:264330145220
Option1ID:264330569137
Option2ID:264330569138
Option3ID:264330569136
Option4ID:264330569135
Status:Answered
ChosenOption: 4

Q.19 The Olympic Winter Games 2026 would be played in _____.

- Ans
- 1. Brisbane
 - 2. LosAngeles
 - 3. MilanoCortina
 - 4. Paris

QuestionID:264330109850
Option1ID:264330431680
Option2ID:264330431679
Option3ID:264330431678
Option4ID:264330431677
Status:Answered
ChosenOption: 3

Q.20 Which ports belong to the western coast of India? Ans

- 1. Kandla port, Mormugao port, Kolkata port
- 2. Kandlaport, Mormugaoport, Kochiport
- 3. Kandlaport, Mormugaoport, Chennaiport
- 4. Kandlaport, Halদিaport, Kochiport

QuestionID:264330132716
Option1ID:264330519961
Option2ID:264330519959
Option3ID:264330519962
Option4ID:264330519960
Status:Answered
ChosenOption: 2

Q.21 Who among the following was the Vice President of the Interim Government formed by Congress in 1946?

- Ans
- 1. Vallabhbhai Patel
 - 2. BaldevSingh
 - 3. JohnMatthai
 - 4. JawaharlalNehru

QuestionID:264330112356
Option1ID:264330441509
Option2ID:264330441511
Option3ID:264330441512
Option4ID:264330441510
Status:Answered
ChosenOption: 2

Q.22 Which east-flowing river basin covers the states of Jharkhand, Chhattisgarh and Orissa and has a Drainage area of 39,033 sq km?

- Ans
- 1. Baitarni
 - 2. Brahmani
 - 3. Nagavali
 - 4. Sarada

QuestionID:264330131027
Option1ID:264330513222
Option2ID:264330513220
Option3ID:264330513219
Option4ID:264330513221
Status:NotAnswered
ChosenOption:--

Q.23 Which of the following statements is NOT true for Indian monsoons? Ans

- 1. Monsoonal rainfall is affected by jet streams
- 2. Monsoonal rainfall is the lifeline of Indian agriculture
- 3. Himalayas play an important role in monsoonal rainfall
- 4. Monsoonal rainfall is not affected by the relief features of the country

QuestionID:264330169989
Option1ID:264330666632
Option2ID:264330666631
Option3ID:264330666634
Option4ID:264330666633
Status:Answered
ChosenOption: 4

Q.24 Who among the following has written the biography of Buddha, Buddhacharita? Ans

- 1. Vasumitra
- 2. Charaka
- 3. Ashvaghosha
- 4. Nagarjuna

QuestionID:264330165578
Option1ID:264330649391
Option2ID:264330649394
Option3ID:264330649393
Option4ID:264330649392
Status:Answered
ChosenOption: 4

Q.25 How many fundamental rights were there at the time of adoption of the Indian Constitution?

- Ans 1. Seven
- 2. Five
 - 3. Six
 - 4. Eight

QuestionID:264330111502
Option1ID:264330438095
Option2ID:264330438093
Option3ID:264330438094
Option4ID:264330438096
Status:Answered
ChosenOption: 1

Q.26 Linthoi Chanambam is associated with which of the following sport events? Ans

- 1. Cricket
- 2. Chess
- 3. Badminton
- 4. Judo

QuestionID:264330109688
Option1ID:264330431030
Option2ID:264330431032
Option3ID:264330431031
Option4ID:264330431029
Status:Answered
ChosenOption: 4

Q.27 In 1957, who defined a model that predicted the shape of individual molecules based on the extent of electron-pair electrostatic repulsion?

- Ans 1. Nyholm and Gillespie
- 2. Heitler and London
 - 3. Staudinger and Perey
 - 4. Marcet and Pauling

QuestionID:264330165460
Option1ID:264330648922
Option2ID:264330648920
Option3ID:264330648919
Option4ID:264330648921
Status:Not Answered
ChosenOption:--

Q.28 In which of the following states is Bonalu festival celebrated? Ans

- 1. Jharkhand
- 2. Gujarat
- 3. Telangana
- 4. Uttar Pradesh

QuestionID:26433064691
Option1ID:264330253356
Option2ID:264330253359
Option3ID:264330253357
Option4ID:264330253358
Status:Answered
ChosenOption: 1

Q.29 Who among the following designed a campaign that came to be known as the 'Rowlatt Satyagrah'?

- Ans
- 1. Mahatma Gandhi
 - 2. Feroze Shah Mehta
 - 3. Mahadev Govind Ranade
 - 4. Bal Gangadhar Tilak

QuestionID:264330106610
Option1ID:264330418743
Option2ID:264330418744
Option3ID:264330418742
Option4ID:264330418741
Status:Answered
ChosenOption: 4

Q.30 Asad Ali Khan was known for playing which of the following Indian instruments? Ans

- 1. Sitar
- 2. Tabla
- 3. Rudra Veena
- 4. Violin

QuestionID:26433074819
Option1ID:264330293366
Option2ID:264330293364
Option3ID:264330293367
Option4ID:264330293365
Status:Answered
ChosenOption: 1

Q.31 Recoveries of loans and advances, borrowings, are an example of _____.

- Ans
- 1. non-tax receipts
 - 2. capital receipts
 - 3. revenue receipts
 - 4. tax receipts

QuestionID:264330141433
Option1ID:264330554070
Option2ID:264330554068
Option3ID:264330554067
Option4ID:264330554069
Status:Answered
ChosenOption: 2

Q.32Thullaldanceoriginatedinwhichofthefollowingstates?Ans

- 1. Uttarakhand
- 2. Kerala
- 3. Manipur
- 4. Gujrat

QuestionID:264330164795
Option1ID:264330646307
Option2ID:264330646308
Option3ID:264330646310
Option4ID:264330646309
Status:Answered
ChosenOption: 2

Q.33WhichwindsblowacrosstheAsiancontinentatlatitudesnorthoftheHimalayas roughly parallel to the Tibetan highlands?

- Ans
- 1. Tradewinds
 - 2. Southwestwinds
 - 3. Jetstreams
 - 4. Northwestwinds

QuestionID:26433064771
Option1ID:264330253679
Option2ID:264330253678
Option3ID:264330253677
Option4ID:264330253676
Status:Answered
ChosenOption: 1

Q.34WhatisthenameoftheComprehensiveHouseholdSurveyprovidinglabourforce statistics in India, which was first conducted in 1955?

- Ans
- 1. PeriodicLabourForceSurvey(PLFS)
 - 2. Employment-UnemploymentSurvey(EUS)
 - 3. QuarterlyEmploymentSurvey(QES)
 - 4. AreaFrameEstablishmentSurvey(AFES)

QuestionID:264330111360
Option1ID:264330437526
Option2ID:264330437528
Option3ID:264330437527
Option4ID:264330437525
Status:Answered
ChosenOption: 1

Q.35DuringtheBritishruleinIndia,whichofthefollowingGovernorGeneralsdevisedthe 'Doctrine of Lapse', a policy of annexation?

- Ans
- 1. Lord Cornwallis
 - 2. LordCanning
 - 3. WarrenHastings
 - 4. LordDalhousie

QuestionID:264330165380
Option1ID:264330648602
Option2ID:264330648601
Option3ID:264330648599
Option4ID:264330648600
Status:Answered
ChosenOption: 4

Q.36 Which compound structure includes a saturated short-chain fatty acid with 4-carbon molecules, commonly found in esterified form in animal fats and plant oils?

- Ans
- 1. Butyric acid
 - 2. Propionic acid
 - 3. Succinic acid
 - 4. Lactic acid

QuestionID:264330110056
Option1ID:264330432503
Option2ID:264330432502
Option3ID:264330432501
Option4ID:264330432504
Status:Not Answered
ChosenOption:--

Q.37 In June _____, the Reserve Bank of India published a 'Consultative Document on Regulation of Microfinance'.

- Ans
- 1. 2021
 - 2. 2019
 - 3. 2022
 - 4. 2020

QuestionID:264330145233
Option1ID:264330569189
Option2ID:264330569187
Option3ID:264330569190
Option4ID:264330569188
Status:Not Answered
ChosenOption:--

Q.38 What amount of 'Seed Capital' is provided as support to a Self-Help Group under the Pradhan Mantri Formalisation of Micro Food Processing Enterprises Scheme?

- Ans
- 1. ₹20,000
 - 2. ₹30,000
 - 3. ₹50,000
 - 4. ₹40,000

QuestionID:26433064563
Option1ID:264330252844
Option2ID:264330252845
Option3ID:264330252847
Option4ID:264330252846
Status:Not Answered
ChosenOption:--

Q.39 The Beating Retreat ceremony is held at which of the following places? Ans

- 1. Chandni Chowk
- 2. Connaught Place
- 3. India Gate
- 4. Vijay Chowk

QuestionID:264330164811
Option1ID:264330646374
Option2ID:264330646373
Option3ID:264330646371
Option4ID:264330646372
Status:Answered
ChosenOption: 4

Q.40 Soparrkar and the logo of his worldwide initiative 'Dance for a Cause' are being printed on an official postage stamp issued by the _____ government.

- Ans
- 1. Bangladesh
 - 2. Sri Lanka
 - 3. Bhutan
 - 4. Nepal

QuestionID:26433054506

Option1ID:264330213010

Option2ID:264330213011

Option3ID:264330213009

Option4ID:264330213008

Status:NotAnswered

ChosenOption:--

Q.41 Who among the following Bahmanisultan transferred his capital from Gulbarga to Bidar?

- Ans
- 1. Humayun
 - 2. Mujahid Shah
 - 3. Ahmad Shah
 - 4. Firuz Shah

QuestionID:264330109015

Option1ID:264330428340

Option2ID:264330428338

Option3ID:264330428339

Option4ID:264330428337

Status:NotAnswered

ChosenOption:--

Q.42 In which of the following cases the Supreme Court, while laying out the 'basic structure' of the Constitution held that the democratic character of the polity was an essential component of the 'basic structure'?

- Ans
- 1. Sajjan Singh vs State of Rajasthan
 - 2. Kesavananda Bharati vs State of Kerala
 - 3. Romesh Thappar vs State of Madras
 - 4. AK Gopalan vs State of Madras

QuestionID:264330145273

Option1ID:264330569350

Option2ID:264330569347

Option3ID:264330569349

Option4ID:264330569348

Status:Answered

ChosenOption: 2

Q.43 In 2015, the eminent danseuse and _____ exponent, Padma Subrahmanyam was selected for Kerala's prestigious choreography award 'Nishagandhi Puraskaram' instituted by the state tourism department.

- Ans
- 1. Kathakali
 - 2. Sattriya
 - 3. Bharatanatyam
 - 4. Kuchipudi

QuestionID:26433054509
Option1ID:264330213021
Option2ID:264330213023
Option3ID:264330213022
Option4ID:264330213020
Status:Answered
ChosenOption: 1

Q.44 What do you call the fluid matrix filling in the cell? Ans

- 1. Ribosome
- 2. Plasmid
- 3. Cytoplasm
- 4. Golgi bodies

QuestionID:26433064758
Option1ID:264330253624
Option2ID:264330253627
Option3ID:264330253626
Option4ID:264330253625
Status:Answered
ChosenOption: 1

Q.45 'A Grain Of Sand In The Hourglass Of Time' is an autobiography of which Indian politician?

- Ans
- 1. I.K. Gujral
 - 2. Arjun Singh
 - 3. Manmohan Singh
 - 4. L.K. Advani

QuestionID:264330145177
Option1ID:264330568965
Option2ID:264330568964
Option3ID:264330568966
Option4ID:264330568963
Status:Answered
ChosenOption: 2

Q.46 Which odourless, colourless, tasteless and chemically unreactive gas was invented by Daniel Rutherford in 1772 and was independently isolated at the same time by CW Scheele and H Cavendish?

- Ans 1. Nitrogen
 2. Argon
 3. Fluorine
 4. Oxygen

QuestionID:264330110057
Option1ID:264330432505
Option2ID:264330432508
Option3ID:264330432506
Option4ID:264330432507
Status:Answered
ChosenOption: 2

Q.47 _____ 2005 is referred to as the 'Right to Work' as it guaranteed 100 days of employment in a year by the Indian Government to people who are in need of and who are able to do work.

- Ans 1. Mahatma Gandhi Regional Employment Guarantee Act
 2. Mahatma Gandhi Rural Employment Act
 3. Mahatma Gandhi National Rural Employment Guarantee Act
 4. Mohan Gandhi Regional Guarantee Act

QuestionID:264330163259
Option1ID:264330640350
Option2ID:264330640349
Option3ID:264330640347
Option4ID:264330640348
Status:Answered
ChosenOption: 3

Q.48 In which year did Albert Einstein predict a new state of matter, the Bose-Einstein condensate (BEC), based on a quantum formulation by the Indian physicist Satyendra Nath Bose?

- Ans 1. 1919
 2. 1935
 3. 1924
 4. 1930

QuestionID:264330145219
Option1ID:264330569131
Option2ID:264330569134
Option3ID:264330569132
Option4ID:264330569133
Status:Answered
ChosenOption: 3

Q.49 The main function of centriole is:

- Ans
- 1. to help plant cell for multiplication
 - 2. to help cell division in animal cell
 - 3. to maintain rigidity in plant cell
 - 4. to maintain mineral composition in bacterial cell

QuestionID:26433082209

Option1ID:264330322672

Option2ID:264330322669

Option3ID:264330322671

Option4ID:264330322670

Status:Not Answered

ChosenOption:--

Q.50 How many planets are terrestrial planets? Ans

- 1. 3
- 2. 6
- 3. 4
- 4. 5

QuestionID:264330113351

Option1ID:264330445489

Option2ID:264330445492

Option3ID:264330445490

Option4ID:264330445491

Status:Answered

ChosenOption: 3

Section:Quantitative Aptitude

Q.1 The total surface area of a square-based right pyramid is 1536m^2 , of which 37.5% is the area of the base of the pyramid. What is the volume (in m^3) of this pyramid?

- Ans
- 1. 3048
 - 2. 3072
 - 3. 3144
 - 4. 3108

QuestionID:264330122882

Option1ID:264330481596

Option2ID:264330481598

Option3ID:264330481597

Option4ID:264330481595

Status:Not Answered

ChosenOption:--

Q.2 If $\sin A + \sin^2 A = 1$, then the value of $\cos^4 A + \cos^6 A$ is:

Ans 1. $\cos A$

2. $\sin A$

3. 1

4. 0

QuestionID:264330157757

Option1ID:264330618388

Option2ID:264330618387

Option3ID:264330618389

Option4ID:264330618390

Status:NotAnswered

ChosenOption:--

Q.3 The radius of a circle is 1.75 cm. What is the circumference of the circle?

(Take $\pi = \frac{22}{7}$)

Ans 1. 5.5 cm

2. 11 cm

3. 9.63 cm

4. 2.2 cm

QuestionID:264330165442

Option1ID:264330648848

Option2ID:264330648847

Option3ID:264330648850

Option4ID:264330648849

Status:Answered

ChosenOption: 2

Q.4 Let the HCF of m and n be 'a' and let $n = ab$, LCM of m and n is given by:

Ans 1. bm

2. am

3. ab

4. mn

QuestionID:264330145031

Option1ID:264330568380

Option2ID:264330568379

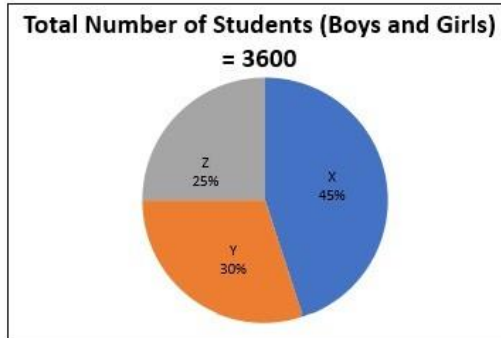
Option3ID:264330568381

Option4ID:264330568382

Status:Answered

ChosenOption: 2

- Q.5** Study the given pie-chart and answer the question that follows.
The pie-chart shows the number of students (boys and girls) studying in standard 10 of various schools (X, Y, Z in the year 2022).



What is the difference between the total number of students (boys and girls) in school Y and Z together and the total number of students (boys and girls) in school X and Y together?

- Ans** 1. 720
 2. 840
 3. 780
 4. 820

QuestionID:264330158277
Option1ID:264330620470
Option2ID:264330620467
Option3ID:264330620469
Option4ID:264330620468
Status:Answered
ChosenOption: 1

- Q.6** The radius of the base of a right circular cone is 5 cm. Its slant height is 13 cm.
What is its volume (in cm^3 , rounded off to 1 decimal place)? (Take $\pi = \frac{22}{7}$)

- Ans** 1. 328.6
 2. 323.4
 3. 314.3
 4. 340.5

QuestionID:264330145116
Option1ID:264330568720
Option2ID:264330568721
Option3ID:264330568722
Option4ID:264330568719
Status:Answered
ChosenOption: 3

Q.7 A sum of money was invested at 10% interest per year, compounded half-yearly, for 18 months. If the amount payable on maturity was ₹64,827, what was the sum invested?

- Ans 1. ₹55,600
 2. ₹56,000
 3. ₹56,800
 4. ₹56,500

QuestionID:264330145055

Option1ID:264330568476

Option2ID:264330568475

Option3ID:264330568478

Option4ID:264330568477

Status:Answered

ChosenOption: 2

Q.8 Let C be a circle with centre O and radius 5 cm. Let PQ be a tangent to the circle and A be the point of tangency. Let B be a point on PQ such that the length of AB is 12 cm. If the line joining O and B intersects the circle at R, find the length of BR (in cm).

- Ans 1. 2
 2. 13
 3. 6
 4. 8

QuestionID:264330165413

Option1ID:264330648731

Option2ID:264330648732

Option3ID:264330648734

Option4ID:264330648733

Status:Answered

ChosenOption: 4

Q.9 The value of $1\frac{2}{5} - \left[3\frac{3}{4} \div \left\{ 1\frac{1}{4} \div \frac{1}{2} \left(1\frac{1}{2} \times 3\frac{1}{3} \div 1\frac{1}{3} \right) \right\} \right]$ is:

- Ans 1. 3
 2. 0
 3. 2
 4. 1

QuestionID:264330165154

Option1ID:264330647718

Option2ID:264330647717

Option3ID:264330647715

Option4ID:264330647716

Status:Answered

ChosenOption: 4

Q.10 When A alone does a piece of work, he takes 25 days more than the time taken by A and B to do the work together. On the other hand, B alone takes 16 days more than the time taken by A and B to do the work together. How many days will A and B, working together, take to do the work?

Ans 1. 24

2. 20

3. 23

4. 22

QuestionID:264330131527

Option1ID:264330515211

Option2ID:264330515214

Option3ID:264330515212

Option4ID:264330515213

Status:Answered

ChosenOption: 2

Q.11 In what proportions should a grocer mix wheat at ₹12 per kg and ₹25 per kg so as to make a mixture of worth ₹20 per kg?

Ans 1. 8 : 3

2. 3 : 5

3. 5 : 8

4. 5 : 7

QuestionID:264330104488

Option1ID:264330410255

Option2ID:264330410253

Option3ID:264330410254

Option4ID:264330410256

Status:Answered

ChosenOption: 3

Q.12 Find the mean proportional between 32 and 162. Ans

1. 99

2. 65

3. 72

4. 97

QuestionID:264330103970

Option1ID:264330408184

Option2ID:264330408182

Option3ID:264330408183

Option4ID:264330408181

Status:Answered

ChosenOption: 3

Q.13 Rakesh purchased a basket, a wallet and a belt. She got discounts of 5%, 8% and 10% on the basket, the wallet and the belt, respectively, on their respective marked prices of ₹80, ₹150 and ₹350. How much amount (in ₹) did she pay in total?

Ans 1. 529

2. 51

3. 580

4. 519

QuestionID:264330105972

Option1ID:264330416192

Option2ID:264330416190

Option3ID:264330416189

Option4ID:264330416191

Status:Answered

ChosenOption: 1

Q.14 In ΔABC , $\angle B = 90^\circ$ and $AB:BC = 1:2$. The value of $\cos A + \tan C$ is:

Ans 1. $\frac{5+\sqrt{5}}{2\sqrt{5}}$

2. $\frac{1+\sqrt{5}}{2\sqrt{5}}$

3. $\frac{2\sqrt{5}}{2+\sqrt{5}}$

4. $\frac{2+\sqrt{5}}{2\sqrt{5}}$

QuestionID:264330145131

Option1ID:264330568780

Option2ID:264330568781

Option3ID:264330568779

Option4ID:264330568782

Status:Not Answered

ChosenOption:--

Q.15 The product of two numbers is 20000. If their LCM is 800, then what is their HCF? Ans

1. 25

2. 30

3. 35

4. 20

QuestionID:26433073069

Option1ID:264330286470

Option2ID:264330286469

Option3ID:264330286471

Option4ID:264330286468

Status:Answered

ChosenOption: 4

Q.16

If $a + \frac{1}{a} = 3$, then the value of $a^4 + \frac{1}{a^4}$ is:

- Ans
- 1. 48
 - 2. 81
 - 3. 27
 - 4. 47

QuestionID:264330157776

Option1ID:264330618464

Option2ID:264330618463

Option3ID:264330618466

Option4ID:264330618465

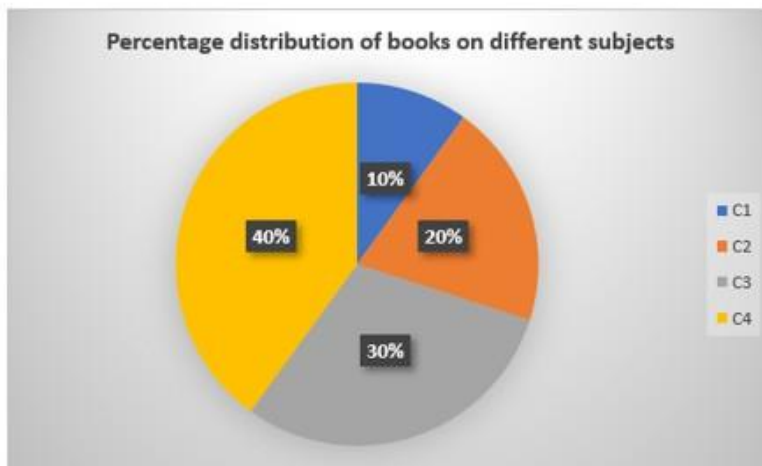
Status:Answered

ChosenOption: 4

Q.17

Study the given graph and answer the question that follows.

The given graph represents the percentage of books on different subjects that a person has in his library.



If the total number of books is 60, then what is the ratio of the number of books on subject C1 to the average number of books per subject?

- Ans
- 1. 3 : 7
 - 2. 2 : 3
 - 3. 3 : 5
 - 4. 2 : 5

QuestionID:264330157066

Option1ID:264330615638

Option2ID:264330615636

Option3ID:264330615637

Option4ID:264330615635

Status:Answered

ChosenOption: 2

Q.18 Find the value of $\frac{\cos 37^\circ}{\sin 53^\circ} - \cos 47^\circ \operatorname{cosec} 43^\circ$.

Ans 1. 0

2. -1

3. 2

4. 1

QuestionID:264330158293

Option1ID:264330620533

Option2ID:264330620534

Option3ID:264330620531

Option4ID:264330620532

Status:Not Answered

ChosenOption:--

Q.19 The volume of a sphere is given by 130977 cm^3 . Its surface area (in cm^2) is: Ans

1. 16847

2. 12474

3. 17424

4. 14274

QuestionID:264330145111

Option1ID:264330568701

Option2ID:264330568702

Option3ID:264330568700

Option4ID:264330568699

Status:Answered

ChosenOption: 2

Q.20 The speed of a boat in standing water is 6 km/h and the speed of the stream is 2.5 km/h. A man rows to a place at a distance of 59.5 kilometres and comes back to the starting point. The total time taken by him is:

Ans 1. 16 hours

2. 24 hours

3. 22 hours

4. 18 hours

QuestionID:264330103627

Option1ID:264330406813

Option2ID:264330406816

Option3ID:264330406815

Option4ID:264330406814

Status:Answered

ChosenOption: 2

Q.21 The table below shows the number of students commuting to school by different modes of transport:

Modes of transport	School bus	Bicycle	Walking	Other vehicles
No. of boys	80	280	130	200
No. of girls	140	190	90	250

Which mode of transport is used by maximum number of students?

- Ans
- 1. Bicycle
 - 2. Walking
 - 3. Other vehicles
 - 4. Schoolbus

QuestionID:264330165073

Option1ID:264330647420

Option2ID:264330647421

Option3ID:264330647422

Option4ID:264330647419

Status:Answered

ChosenOption: 1

Q.22 A boat covers a distance of 72 km downstream in 6 hours, while it takes 12 hours to cover the same distance upstream. What is the speed of the boat in still water?

- Ans
- 1. 6 km/h
 - 2. 9 km/h
 - 3. 10 km/h
 - 4. 8 km/h

QuestionID:264330145097

Option1ID:264330568644

Option2ID:264330568646

Option3ID:264330568645

Option4ID:264330568643

Status:Answered

ChosenOption: 2

Q.23

Simplify: $5\frac{1}{3} - \left\{ 4\frac{1}{3} + \left(3\frac{1}{3} \div 2\frac{1}{3} - \frac{1}{3} \right) \right\}$

- Ans
- 1. $\frac{2}{3}$
 - 2. $\frac{1}{3}$
 - 3. $-\frac{1}{3}$
 - 4. $-\frac{2}{3}$

QuestionID:26433074218

Option1ID:264330290993

Option2ID:264330290995

Option3ID:264330290994

Option4ID:264330290992

Status:Answered

ChosenOption: 4

Q.24

Simplify $\frac{1 - \frac{3}{7} \div \frac{9}{49} \times \frac{3}{14}}{1 + \frac{3}{5} \div \frac{1}{25} \times \frac{1}{30}}$.

Ans

1. $\frac{1}{7}$

2. $\frac{1}{6}$

3. $\frac{1}{3}$

4. $\frac{1}{5}$

QuestionID:26433074445

Option1ID:264330291869

Option2ID:264330291870

Option3ID:264330291871

Option4ID:264330291868

Status:Answered

ChosenOption: 3

Q.25 In an election between two candidates, 80% of the voters cast their votes, out of which 5% votes were declared invalid. A candidate got 9500 votes which were 80% of the valid votes. Find the total number of voters enrolled in that election.

Ans 1. 14780

2. 15100

3. 15625

4. 16100

QuestionID:264330158382

Option1ID:264330620887

Option2ID:264330620888

Option3ID:264330620889

Option4ID:264330620890

Status:Answered

ChosenOption: 4

Q.26 An inlet pipe can fill an empty tank in 3.6 hours, while an outlet pipe can drain a completely-filled tank in 6.3 hours. If both the pipes are opened simultaneously when the tank is empty, in how many hours will the tank get completely filled?

Ans 1. 9.0

2. 8.4

3. 8.1

4. 8.7

QuestionID:264330103286

Option1ID:264330405452

Option2ID:264330405450

Option3ID:264330405449

Option4ID:264330405451

Status:Answered

ChosenOption: 2

Q.27 AvisoldahousetoBhargavatagainof10%andBhargavsoldittoChetanatagainof 20%.IfChetanpaid₹2,64,00,000forit,thenatwhatpricemustAvihavepurchasedit?

- Ans
- ✓ 1. ₹2,00,00,000
 - ✗ 2. ₹2,30,00,000
 - ✗ 3. ₹2,50,00,000
 - ✗ 4. ₹1,75,00,000

QuestionID:264330126573

Option1ID:264330495967

Option2ID:264330495966

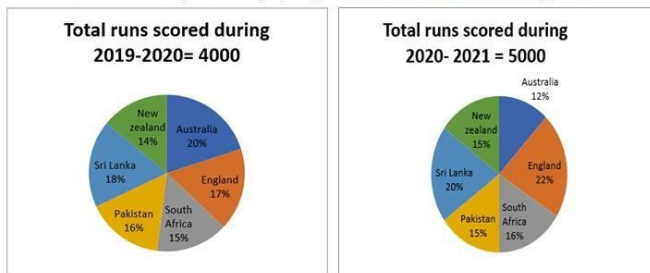
Option3ID:264330495964

Option4ID:264330495965

Status:Answered

ChosenOption: 1

Q.28 The pie chart 1 given below shows the runs scored by a player against 6 different countries during 2019-2020. Pie chart 2 shows the runs scored by the same player against the same 6 countries during 2020-2021.



Find the difference between the total runs scored against New Zealand and Pakistan during 2019-2020 and the total runs scored against Sri Lanka and Pakistan during 2020-2021.

- Ans
- ✗ 1. 500
 - ✗ 2. 600
 - ✗ 3. 650
 - ✓ 4. 550

QuestionID:264330158400

Option1ID:264330620960

Option2ID:264330620961

Option3ID:264330620962

Option4ID:264330620959

Status:Answered

ChosenOption: 4

Q.29 Find the total surface area of a sphere whose volume is $\frac{256}{3} \pi \text{ cm}^3$.

- Ans
- ✗ 1. $48 \pi \text{ cm}^2$
 - ✓ 2. $64 \pi \text{ cm}^2$
 - ✗ 3. $38 \pi \text{ cm}^2$
 - ✗ 4. $56 \pi \text{ cm}^2$

QuestionID:264330103635

Option1ID:264330406847

Option2ID:264330406845

Option3ID:264330406848

Option4ID:264330406846

Status:Answered

ChosenOption: 2

Q.30 If $k(\tan 45^\circ \sin 60^\circ) = \cos 60^\circ \cot 30^\circ$, then the value of k is:

- Ans 1. 1
 2. 2
 3. $\frac{1}{\sqrt{3}}$
 4. $\sqrt{3}$

QuestionID:264330157746
Option1ID:264330618343
Option2ID:264330618346
Option3ID:264330618345
Option4ID:264330618344
Status:Not Answered
ChosenOption:--

Q.31 An inspector is 288 metres behind a thief. The inspector runs 42 metres and the thief runs 30 metres in a minute. In how much time will the inspector catch the thief?

- Ans 1. 24 minutes
 2. 19 minutes
 3. 21 minutes
 4. 20 minutes

QuestionID:264330145067
Option1ID:264330568526
Option2ID:264330568523
Option3ID:264330568524
Option4ID:264330568525
Status:Answered
ChosenOption: 1

Q.32 Three boys, on an average, are 25 years old, and their ages are in the ratio of 3:5:7. What is the age of youngest boy?

- Ans 1. 24 years
 2. 21 years
 3. 12 years
 4. 15 years

QuestionID:264330145048
Option1ID:264330568450
Option2ID:264330568449
Option3ID:264330568447
Option4ID:264330568448
Status:Answered
ChosenOption: 4

Q.33 Two numbers are in the ratio 12:7. If their HCF is 25, find the numbers. Ans

1. 225, 135

2. 300, 175

3. 300, 50

4. 175, 120

QuestionID:264330102309

Option1ID:264330401701

Option2ID:264330401704

Option3ID:264330401703

Option4ID:264330401702

Status:Answered

ChosenOption: 2

Q.34 A dealer sells his goods at 10% loss on the cost price but uses 25% less weight. What is his profit percentage?

Ans 1. 35%

2. 20%

3. 25%

4. 15%

QuestionID:264330102345

Option1ID:264330401847

Option2ID:264330401845

Option3ID:264330401848

Option4ID:264330401846

Status:Answered

ChosenOption: 2

Q.35 A and B undertake a project worth ₹36,000. A alone can do the work in 25 days. They worked together for 5 days. For the next five days, B worked alone. After that, A substituted B and completed the remaining work in 5 days. The share of A in the earnings is:

Ans 1. ₹14,400

2. ₹21,400

3. ₹14,600

4. ₹21,600

QuestionID:26433087395

Option1ID:264330343217

Option2ID:264330343220

Option3ID:264330343219

Option4ID:264330343218

Status:Answered

ChosenOption: 4

Q.36 A shopkeeper has a sale of ₹5,445, ₹5,937, ₹5,865 and ₹6,562 for 4 consecutive days. If he gets an average sale of ₹6,050 for 5 days, then his sale on the fifth day is:

- Ans 1. ₹6,131
 2. ₹6,341
 3. ₹6,441
 4. ₹6,231

QuestionID:264330165479
Option1ID:264330648995
Option2ID:264330648997
Option3ID:264330648998
Option4ID:264330648996
Status:Answered
ChosenOption: 3

Q.37 Study the given table and answer the question that follows.
The data given in the table is for the month of December 2022.

Company	Total number of employees	Number of female employees
P	4560	2210
Q	4258	1650
R	3052	1280
S	4350	1920

What is the difference between the number of male employees in company P and that in company R?

- Ans 1. 592
 2. 578
 3. 605
 4. 580

QuestionID:264330165502
Option1ID:264330649089
Option2ID:264330649087
Option3ID:264330649090
Option4ID:264330649088
Status:Answered
ChosenOption: 2

Q.38 The following table shows the mobile-addicted population of four different cities Hyderabad, Mumbai, Chennai, and Pune, and the ratio of males to females among them.

City	Mobile-Addicted population	Male : Female
Hyderabad	2,20,000	7 : 8
Mumbai	3,50,000	12 : 13
Chennai	2,00,000	11 : 9
Pune	1,50,000	9 : 11

Find the total number of addicted males in Chennai.

- Ans 1. 1,10,000
 2. 80,000
 3. 1,00,000
 4. 1,20,000

QuestionID:264330167242
Option1ID:264330655964
Option2ID:264330655966
Option3ID:264330655963
Option4ID:264330655965
Status:Answered
ChosenOption: 1

Q.39 A company is manufacturing boxes of three types – plastic, wood and glass. The ratio of the numbers of plastic, wood and glass boxes is 2 : 3 : 5. The difference between the numbers of wood and glass boxes is 144. If the number of plastic boxes is increased by 25%, then what will be the number of plastic boxes now?

- Ans
- 1. 144
 - 2. 360
 - 3. 216
 - 4. 180

QuestionID:264330103318
Option1ID:264330405577
Option2ID:264330405580
Option3ID:264330405579
Option4ID:264330405578
Status:Answered
ChosenOption: 4

Q.40 The fraction equivalent to $\frac{1}{5}\%$ is:

- Ans
- 1. $\frac{1}{125}$
 - 2. $\frac{1}{200}$
 - 3. $\frac{1}{40}$
 - 4. $\frac{1}{500}$

QuestionID:264330145076
Option1ID:264330568560
Option2ID:264330568561
Option3ID:264330568559
Option4ID:264330568562
Status:Answered
ChosenOption: 4

Q.41 After deducting a commission of 20%, a DVD set costs ₹9,080. Its marked price is: Ans

- 1. ₹11,200
- 2. ₹11,350
- 3. ₹10,000
- 4. ₹10,100

QuestionID:264330130930
Option1ID:264330512832
Option2ID:264330512834
Option3ID:264330512831
Option4ID:264330512833
Status:Answered
ChosenOption: 2

Q.42 Anand bought a smart watch from an electronic store for Rs. 4,400. Since she had less money, she paid Rs. 2,000 for down payment and the shopkeeper offered her an alternative to pay Rs. 2,440 after 1 month. Find the rate of interest being charged at simple interest by the shopkeeper in this instalment option?

- Ans 1. 20%
 2. 10%
 3. 22%
 4. 15%

QuestionID:26433063338

Option1ID:264330248005

Option2ID:264330248006

Option3ID:264330248007

Option4ID:264330248004

Status:Answered

ChosenOption: 1

Q.43 PQR is a triangle. The bisectors of the internal angle $\angle Q$ and external angle $\angle R$ intersect at S. If $\angle QSR = 40^\circ$, then $\angle P$ is:

- Ans 1. 40°
 2. 60°
 3. 80°
 4. 30°

QuestionID:264330165660

Option1ID:264330649720

Option2ID:264330649721

Option3ID:264330649722

Option4ID:264330649719

Status:Answered

ChosenOption: 3

Q.44 If $x^4 + y^4 = x^2y^2$, then the value of $x^6 + y^6$ is:

- Ans 1. 2
 2. 0
 3. 1
 4. 3

QuestionID:264330157762

Option1ID:264330618409

Option2ID:264330618407

Option3ID:264330618408

Option4ID:264330618410

Status:Answered

ChosenOption: 1

Q.45 The given table shows the number of students from 4 schools during 2022-2023.

Schools	Total no. of students	Boys	Girls
A	2060	1339	721
B	1880	1034	846
C	2200	990	1210
D	1680	924	756

What is the percentage of girls in school B?

- Ans
- 1. 65%
 - 2. 45%
 - 3. 60%
 - 4. 55%

QuestionID:264330165489
Option1ID:264330649038
Option2ID:264330649035
Option3ID:264330649037
Option4ID:264330649036
Status:Answered
ChosenOption: 2

Q.46 E, F, G, and H are four points lying on the circumference of a circle to make a cyclic quadrilateral. If $\angle FGH = 57^\circ$, then what will be the measure of the $\angle HEF$?

- Ans
- 1. 33°
 - 2. 123°
 - 3. 93°
 - 4. 143°

QuestionID:264330165694
Option1ID:264330649855
Option2ID:264330649857
Option3ID:264330649856
Option4ID:264330649858
Status:Answered
ChosenOption: 2

Q.47 The square root of $\left(\frac{1}{4}\right) \times \left(\frac{1}{9}\right) \times \left(\frac{1}{25}\right) \times \left(\frac{1}{49}\right) \div \left(\frac{36}{121}\right)$ is:

- Ans
- 1. $\frac{11}{1260}$
 - 2. $\frac{1260}{11}$
 - 3. $\frac{11}{12.60}$
 - 4. $\frac{1}{1260}$

QuestionID:26433063987
Option1ID:264330250540
Option2ID:264330250542
Option3ID:264330250543
Option4ID:264330250541
Status:Answered
ChosenOption: 1

Q.48 If the radius of a hemispherical balloon increases from 4 cm to 7 cm as air is pumped into it, find the ratio of the surface area of the new balloon to its original.

- Ans 1. 16 : 21
 2. 49 : 16
 3. 20 : 49
 4. 21 : 12

QuestionID:264330103638

Option1ID:264330406860

Option2ID:264330406857

Option3ID:264330406859

Option4ID:264330406858

Status:Answered

ChosenOption: 2

Q.49 The sales of batteries (in lakhs) manufactured by a company over the years are shown in the given table.

YEAR	TYPES OF BATTERIES					
	4AH	7AH	32AH	35AH	55AH	Total
1992	75	144	114	102	108	543
1993	90	126	102	84	126	528
1994	96	114	75	105	135	525
1995	105	90	150	90	75	510
1996	90	75	135	75	90	465
1997	105	60	165	45	120	495
1998	115	85	160	100	145	605

Which type of battery had the highest total sales over the last seven years?

- Ans 1. 32AH
 2. 35AH
 3. 4AH
 4. 55AH

QuestionID:264330145025

Option1ID:264330568356

Option2ID:264330568357

Option3ID:264330568355

Option4ID:264330568358

Status:Answered

ChosenOption: 1

Q.50 Study the given table and answer the question that follows.

The table shows the number of students studying in 6 different classes of 6 different schools.

Schools	V	VI	VII	VIII	IX	X
P	152	160	145	156	147	144
Q	148	166	150	155	157	143
R	161	152	140	145	143	165
S	159	142	149	140	142	168
T	147	144	158	163	154	150
U	150	160	162	160	160	140
Total	917	924	904	919	903	910

Which class has the maximum number of students from all schools together?

Ans 1. X

2. VII

3. VI

4. V

QuestionID:264330157724

Option1ID:264330618258

Option2ID:264330618257

Option3ID:264330618256

Option4ID:264330618255

Status:Answered

ChosenOption: 3

Section: English Comprehension

Select the most appropriate synonym of the given word.

Spontaneous

Ans 1. Attractive

2. Exhaustive

3. Instinctive

4. Acquisitive

QuestionID:264330163330

Option1ID:264330640622

Option2ID:264330640621

Option3ID:264330640619

Option4ID:264330640620

Status:Answered

ChosenOption: 3

Some words in the following sentence have been underlined and given as options. Select the option that contains a spelling error.

The rolling waves on the beach were so rainquill and soothing.

Ans 1. beach

2. trainquil

3. soothing

4. rolling

QuestionID:264330121270

Option1ID:264330475284

Option2ID:264330475285

Option3ID:264330475286

Option4ID:264330475283

Status:Answered

ChosenOption: 2

Partsofthefollowingsentencehavebeengivenasoptions.Selecttheoptionthat contains an error.

Raniwasextremeupsetwithherresultsthisyear.

- Ans 1. extremeupset
 2. thisyear
 3. withherresults
 4. Raniwas

QuestionID:264330134123
Option1ID:264330525516
Option2ID:264330525518
Option3ID:264330525517
Option4ID:264330525515
Status:Answered
ChosenOption: 1

Q.4Fourwordshavebeenunderlinedinthegivensentenceofwhichonewordhas a spelling error. Identify the incorrectly spelt word.

The tiger thrshed (A) against this chains (B) in the cage at the circus (C) but nobody paid him any heed (D).

- Ans 1. thrshed
 2. circus
 3. chains
 4. heed

QuestionID:264330122806
Option1ID:264330481291
Option2ID:264330481293
Option3ID:264330481292
Option4ID:264330481294
Status:Answered
ChosenOption: 1

Q.5Selectthemostappropriatemeaningoftheunderlinedidiom.

We've sent a very strong protest letter. That should make them sit up and takenote.

- Ans 1. Follow
 2. Attend
 3. Observe
 4. Consider

QuestionID:26433099070
Option1ID:264330388916
Option2ID:264330388915
Option3ID:264330388913
Option4ID:264330388914
Status:Answered
ChosenOption: 4

Q.6 Select the most appropriate ANTONYM of the given word.

Defunct

- Ans 1. Stoicism
 2. Extant
 3. Convoluted
 4. Redundant

QuestionID:264330163400
Option1ID:264330640881
Option2ID:264330640882
Option3ID:264330640880
Option4ID:264330640879
Status:Answered
ChosenOption: 1

Q.7 You are preparing a speech for the upcoming function. Select a synonym for the highlighted word to make it better.

The education system must evolve to keep pace with the rapid changes in the job market.

- Ans 1. Emanate
 2. Censor
 3. Demolish
 4. Conceal

QuestionID:264330121903
Option1ID:264330477768
Option2ID:264330477770
Option3ID:264330477767
Option4ID:264330477769
Status:Answered
ChosenOption: 1

Q.8 Select the option that will improve the underlined part of the given sentence.
The village Seoni is located 113 km away from the capital city of MP, Bhopal.

- Ans 1. adjacent from city capital of MP, Bhopal
 2. far from the capital city of MP, Bhopal
 3. near from the city capital of MP, Bhopal
 4. proximate from capital of MP, Bhopal

QuestionID:264330145290
Option1ID:264330569415
Option2ID:264330569418
Option3ID:264330569416
Option4ID:264330569417
Status:Answered
ChosenOption: 2

Q.9 Select the sentence that has a spelling error.

A- Keeping cities clean and free of germs is particularly essential for keeping their residents healthy.

B- Our health depends not just on our nutrition and personal hygiene but also on how we clean our cities and surroundings.

C- The spread of various diseases is intricately linked to the deteriorating state of public health condition.

D- The good news is that waste management, to keep cities clean, is now getting attention through the Swachh Bharat Mission.

- Ans
- 1. The good news is that waste management, to keep cities clean, is now getting attention through the Swachh Bharat Mission.
 - 2. The spread of various diseases is intricately linked to the deteriorating state of public health condition.
 - 3. Keeping cities clean and free of germs is particularly essential for keeping their residents healthy.
 - 4. Our health depends not just on our nutrition and personal hygiene but also on how we clean our cities and surroundings.

QuestionID:264330141564

Option1ID:264330554594

Option2ID:264330554593

Option3ID:264330554591

Option4ID:264330554592

Status:Answered

ChosenOption: 4

Q.10 Select the most appropriate option that can substitute the underlined word in the given sentence.

The new professor is liked by his students for his amiable approach.

- Ans
- 1. simple
 - 2. strict
 - 3. academic
 - 4. friendly

QuestionID:264330117217

Option1ID:264330460932

Option2ID:264330460929

Option3ID:264330460931

Option4ID:264330460930

Status:Answered

ChosenOption: 4

Q.11 Select the option that can be used as a one-word substitute for the given group of words.

Spoken or done without any previous thought or preparation

- Ans
- 1. Inaugural
 - 2. Maiden
 - 3. Extempore
 - 4. Initiative

QuestionID:26433088197

Option1ID:264330346381

Option2ID:264330346382

Option3ID:264330346384

Option4ID:264330346383

Status:Answered

ChosenOption: 3

Q.12 Select the option that can be used as a one-word substitute for the given group of words.

A place where coins are made

- Ans 1. Trough
 2. Post Office
 3. Grove
 4. Mint

QuestionID:26433088757
Option1ID:264330348582
Option2ID:264330348583
Option3ID:264330348581
Option4ID:264330348584
Status:Answered
ChosenOption: 4

Q.13 Select the most appropriate ANTONYM of the given word. Vague

- Ans 1. Elegant
 2. Regal
 3. Definite
 4. Dwarf

QuestionID:264330164276
Option1ID:264330644329
Option2ID:264330644330
Option3ID:264330644327
Option4ID:264330644328
Status:Answered
ChosenOption: 4

Q.14 Select the option that can be used as a one-word substitute for the given group of words.

Something of monstrous size or power

- Ans 1. Bulk
 2. Amazon
 3. Heavyweight
 4. Behemoth

QuestionID:26433088439
Option1ID:264330347342
Option2ID:264330347341
Option3ID:264330347344
Option4ID:264330347343
Status:Answered
ChosenOption: 4

Q.15 Select the most appropriate idiomatic expression to fill in the blank.

Our Director took a meeting and asked us to express our views on _____ of the new HR policy.

- Ans
- 1. the bandwagon
 - 2. the pros and cons
 - 3. the hook
 - 4. the ups and downs

QuestionID:26433092080
Option1ID:264330361644
Option2ID:264330361641
Option3ID:264330361643
Option4ID:264330361642
Status:Answered
ChosenOption: 2

Q.16 Select the most appropriate idiom that can substitute the underlined segment in the given sentence.

Hegot a burst of energy and started digging again.

- Ans
- 1. took bull by the horns
 - 2. a fancy of someone
 - 3. second wind
 - 4. heart on the sleeve

QuestionID:264330117164
Option1ID:264330460723
Option2ID:264330460724
Option3ID:264330460721
Option4ID:264330460722
Status:Answered
ChosenOption: 3

Q.17 Select the most appropriate ANTONYM of the given word. Brave

- Ans
- 1. Elegant
 - 2. Cordial
 - 3. Cowardly
 - 4. Courageous

QuestionID:264330164167
Option1ID:264330643922
Option2ID:264330643919
Option3ID:264330643921
Option4ID:264330643920
Status:Answered
ChosenOption: 3

Q.18 Select the most appropriate synonym of the given word.

Behold

- Ans 1. Look
 2. Burden
 3. Fortunate
 4. Predict

QuestionID:264330163370
Option1ID:264330640769
Option2ID:264330640770
Option3ID:264330640768
Option4ID:264330640767
Status:Answered
ChosenOption: 2

Q.19 Select the most appropriate option that can substitute the underlined segment in the given sentence.

Agust of wind came abruptly and our sandcastle toppled.

- Ans 1. tumbled down
 2. ran after
 3. turned up
 4. blew out

QuestionID:26433099884
Option1ID:264330392127
Option2ID:264330392126
Option3ID:264330392128
Option4ID:264330392125
Status:Answered
ChosenOption: 1

Q.20 Part of the following sentence have been given as options. One of them may contain an error. Select the part that contains the error from the given options. If you don't find any error, mark 'No error' as your answer.

Luckily, I managed to get a room in the college hostel, and I move in there.

- Ans 1. and I move in there
 2. Luckily, I managed to get a room
 3. in the college hostel
 4. No error

QuestionID:26433090493
Option1ID:264330355423
Option2ID:264330355421
Option3ID:264330355422
Option4ID:264330355424
Status:Answered
ChosenOption: 1

Q.21 Select the most appropriate meaning of the given idiom.
Open your heart

- Ans
- 1. Immediately think of something
 - 2. Share your deepest feelings
 - 3. Feel relieved because the stress is removed
 - 4. Could do something very easily

QuestionID:264330135999
Option1ID:264330532838
Option2ID:264330532835
Option3ID:264330532836
Option4ID:264330532837
Status:Answered
ChosenOption: 2

Q.22 Select the most appropriate one-word substitution of the given group of words.

A list of source material that are used or consulted in the preparation of a work or that are referred to in the text.

- Ans
- 1. Bibliography
 - 2. Bibliophile
 - 3. Bibliotheca
 - 4. Bibliomemoir

QuestionID:26433090850
Option1ID:264330356810
Option2ID:264330356809
Option3ID:264330356812
Option4ID:264330356811
Status:Answered
ChosenOption: 1

Q.23 Select the most appropriate idiom to fill in the blank.

The company had some initial problems, but now it is _____.

- Ans
- 1. flying like a rock
 - 2. flying the nest
 - 3. flying a kite
 - 4. flying high

QuestionID:264330163338
Option1ID:264330640654
Option2ID:264330640653
Option3ID:264330640651
Option4ID:264330640652
Status:Answered
ChosenOption: 4

Q.24 Select the most appropriate meaning of the given idiom. Burn one's bridges

- Ans 1. Working very hard
 2. Impossible to return to an earlier state
 3. Having an overnight success
 4. Attack on one's enemy

QuestionID:264330135902
Option1ID:264330532464
Option2ID:264330532463
Option3ID:264330532466
Option4ID:264330532465
Status:Answered
ChosenOption: 2

Q.25 Select the option that can be used as a one-word substitute for the given group of words.

An ability to do several things at the same time.

- Ans 1. Indictment
 2. Blasphemy
 3. Unitasking
 4. Multitasking

QuestionID:26433088967
Option1ID:264330349408
Option2ID:264330349407
Option3ID:264330349405
Option4ID:264330349406
Status:Answered
ChosenOption: 4

Q.26 Select the most appropriate meaning of the underlined idiom that can be substituted in the following sentence.

Right now, my hands are full.

- Ans 1. My hands are filled up
 2. My hands are swollen
 3. I'm very tired
 4. I'm very busy

QuestionID:26433094758
Option1ID:264330371865
Option2ID:264330371866
Option3ID:264330371868
Option4ID:264330371867
Status:Answered
ChosenOption: 4

Q.27 Select the INCORRECTLY spelt word. Answer

- s
- 1. Click
 - 2. Caricature
 - 3. Cumbersome
 - 4. Cumulative

QuestionID:26433089392
Option1ID:264330351072
Option2ID:264330351070
Option3ID:264330351071
Option4ID:264330351069
Status:Answered
ChosenOption: 2

Q.28 Select the most appropriate ANTONYM of the given word. Credit

- Ans
- 1. Litigate
 - 2. Install
 - 3. Debit
 - 4. Impute

QuestionID:26433096221
Option1ID:264330377640
Option2ID:264330377639
Option3ID:264330377637
Option4ID:264330377638
Status:Answered
ChosenOption: 3

Q.29 Select the most appropriate meaning of the given idiom. Boil the ocean

- Ans
- 1. Something very big
 - 2. Something which gets hot gradually
 - 3. Try to do something impossible
 - 4. To make someone very angry

QuestionID:264330135901
Option1ID:264330532460
Option2ID:264330532461
Option3ID:264330532462
Option4ID:264330532459
Status:Answered
ChosenOption: 3

Q.30 The following sentence has been split into four segments. Identify the segment that contains a grammatical error.
"You look so young! / When did you complete your graduation?" / asked Rekha / to her neighbour.

- Ans
- 1. to her neighbour
 - 2. When did you complete your graduation?
 - 3. asked Rekha
 - 4. You look so young!

QuestionID:264330139157
Option1ID:264330545206
Option2ID:264330545204
Option3ID:264330545205
Option4ID:264330545203
Status:Answered
ChosenOption: 2

Q.31 Select the correct spelling of the incorrectly spelt word.

Diplomats believe that bureaucratic delays are inevitable.

- Ans
- 1. inivitable
 - 2. burocratic
 - 3. beleave
 - 4. bureaucratic

QuestionID:26433088980
Option1ID:264330349458
Option2ID:264330349457
Option3ID:264330349460
Option4ID:264330349459
Status:Answered
ChosenOption: 4

Q.32 Select the option that can be used as a one-word substitute for the given group of words.

The compulsion to tell lies

- Ans
- 1. Pyromania
 - 2. Nymphomania
 - 3. Megalomania
 - 4. Mythomania

QuestionID:26433088995
Option1ID:264330349519
Option2ID:264330349520
Option3ID:264330349517
Option4ID:264330349518
Status:Not Answered
ChosenOption:--

Q.33 Select the most appropriate ANTONYM of the word 'hinderance' in the given sentence and choose the correct option.

The refreshing breeze blew through the open window, bringing relief from the summer heat.

- Ans
- 1. Bringing
 - 2. Blew
 - 3. Refreshing
 - 4. Relief

QuestionID:264330163537
Option1ID:264330641405
Option2ID:264330641404
Option3ID:264330641403
Option4ID:264330641406
Status:Answered
ChosenOption: 4

Q.34 The following sentence has been divided into parts. One of them may contain an error. Select the part that contains the error from the given options. If you don't find any error, mark 'No error' as your answer.
Neem tastes a little bitterly, but it is very useful.

- Ans
- 1. a little bitterly
 - 2. Neem tastes
 - 3. but it is very useful
 - 4. No error

QuestionID:264330117146
Option1ID:264330460654
Option2ID:264330460653
Option3ID:264330460655
Option4ID:264330460656
Status:Answered
ChosenOption: 1

Q.35 Select the option that can be used as a one-word substitute for the given group of words.
Someone who pretends to have certain moral standards while secretly that person practices those very moral lapses.

- Ans
- 1. Sinner
 - 2. Actor
 - 3. Spy
 - 4. Hypocrite

QuestionID:26433088806
Option1ID:264330348778
Option2ID:264330348777
Option3ID:264330348780
Option4ID:264330348779
Status:Answered
ChosenOption: 4

Q.36 Select the most appropriate idiomatic expression to substitute for the underlined segment in the given sentence.

I had to work late in the night for nearly three months to write my first book.

- Ans
- 1. to take a back seat
 - 2. to burn the midnight oil
 - 3. to blow a fuse
 - 4. to look through coloured glasses

QuestionID:26433092082

Option1ID:264330361650

Option2ID:264330361652

Option3ID:264330361649

Option4ID:264330361651

Status:Answered

ChosenOption: 2

Q.37 Select the option that can be used as a one-word substitute for the given group of words.

A person who does not eat any animal product

- Ans
- 1. Vegetarian
 - 2. Veggie
 - 3. Vegan
 - 4. Non-vegetarian

QuestionID:26433088897

Option1ID:264330349133

Option2ID:264330349136

Option3ID:264330349135

Option4ID:264330349134

Status:Answered

ChosenOption: 3

Q.38 Select the most appropriate meaning of the underlined idiom. You must lie in the bed you have made.

- Ans
- 1. Face the unpleasant consequences of your own acts
 - 2. Sleep on the bed you made yourself
 - 3. Sleep in your own bed
 - 4. Be contented always

QuestionID:26433098330

Option1ID:264330385975

Option2ID:264330385974

Option3ID:264330385973

Option4ID:264330385976

Status:Answered

ChosenOption: 1

Q.39 The following sentence has been split into four segments. Identify the segment that contains a grammatical error.

The postman/deliver the letters/through hand,/doortodoor.

- Ans
- 1. The postman
 - 2. deliver the letters
 - 3. doortodoor
 - 4. through hand

QuestionID:264330145282

Option1ID:264330569383

Option2ID:264330569384

Option3ID:264330569386

Option4ID:264330569385

Status:Answered

ChosenOption: 4

Q.40 Select the most appropriate ANTONYM of the given word.

Demolish

- Ans
- 1. Inferior
 - 2. Annihilate
 - 3. Unmethodical
 - 4. Fabricate

QuestionID:264330163373

Option1ID:264330640780

Option2ID:264330640781

Option3ID:264330640782

Option4ID:264330640779

Status:Answered

ChosenOption: 1

Comprehension:

In the following passage, some words have been deleted. Read the passage carefully and select the most appropriate option to fill in each blank.

It is said that everyone lives (1) _____ selling something. What you can (2) _____ from this statement is that teachers live by selling knowledge, philosophers live by selling wisdom and priests earn their living by selling spiritual comfort. Though it may be possible to measure the value of material goods in terms of money, it is extremely difficult to (3) _____ the true value of the services which people perform for us. There are times when we would (4) _____ give everything we possess to save our lives, yet we might grudge paying a surgeon a high fee for offering us precisely the same service. The (5) _____ of society are such that skills have to be paid for in the same way that goods are paid for at a shop.

SubQuestionNo:41

Q.41 Select the most appropriate option to fill in blank number 1. Ans

- 1. by
- 2. over
- 3. of
- 4. into

QuestionID:264330163286

Option1ID:264330640448

Option2ID:264330640449

Option3ID:264330640450

Option4ID:264330640447

Status:Answered

ChosenOption: 1

Comprehension:

In the following passage, some words have been deleted. Read the passage carefully and select the most appropriate option to fill in each blank.

It is said that everyone lives (1) _____ selling something. What you can (2) _____ from this statement is that teachers live by selling knowledge, philosophers live by selling wisdom and priests earn their living by selling spiritual comfort. Though it may be possible to measure the value of material goods in terms of money, it is extremely difficult to (3) _____ the true value of the services which people perform for us. There are times when we would (4) _____ give everything we possess to save our lives, yet we might grudge paying a surgeon a high fee for offering us precisely the same service. The (5) _____ of society are such that skills have to be paid for in the same way that goods are paid for at a shop.

SubQuestionNo:42

Q.42 Select the most appropriate option to fill in blank number 2. Ans

1. separate

2. derive

3. revive

4. choose

QuestionID:264330163287

Option1ID:264330640454

Option2ID:264330640453

Option3ID:264330640451

Option4ID:264330640452

Status:Answered

ChosenOption: 2

Comprehension:

In the following passage, some words have been deleted. Read the passage carefully and select the most appropriate option to fill in each blank.

It is said that everyone lives (1) _____ selling something. What you can (2) _____ from this statement is that teachers live by selling knowledge, philosophers live by selling wisdom and priests earn their living by selling spiritual comfort. Though it may be possible to measure the value of material goods in terms of money, it is extremely difficult to (3) _____ the true value of the services which people perform for us. There are times when we would (4) _____ give everything we possess to save our lives, yet we might grudge paying a surgeon a high fee for offering us precisely the same service. The (5) _____ of society are such that skills have to be paid for in the same way that goods are paid for at a shop.

SubQuestionNo:43

Q.43 Select the most appropriate option to fill in blank number 3. Ans

1. extort

2. mock

3. conceal

4. estimate

QuestionID:264330163288

Option1ID:264330640456

Option2ID:264330640457

Option3ID:264330640455

Option4ID:264330640458

Status:Answered

ChosenOption: 4

Comprehension:

In the following passage, some words have been deleted. Read the passage carefully and select the most appropriate option to fill in each blank.

It is said that everyone lives (1) _____ selling something. What you can (2) _____ from this statement is that teachers live by selling knowledge, philosophers live by selling wisdom and priests earn their living by selling spiritual comfort. Though it may be possible to measure the value of material goods in terms of money, it is extremely difficult to (3) _____ the true value of the services which people perform for us. There are times when we would (4) _____ give everything we possess to save our lives, yet we might grudge paying a surgeon a high fee for offering us precisely the same service. The (5) _____ of society are such that skills have to be paid for in the same way that goods are paid for at a shop.

SubQuestionNo:44

Q.44 Select the most appropriate option to fill in blank number 4. Ans

- 1. willingly
- 2. thoroughly
- 3. perfectly
- 4. thoughtfully

QuestionID:264330163289

Option1ID:264330640459

Option2ID:264330640460

Option3ID:264330640461

Option4ID:264330640462

Status:Answered

ChosenOption: 1

Comprehension:

In the following passage, some words have been deleted. Read the passage carefully and select the most appropriate option to fill in each blank.

It is said that everyone lives (1) _____ selling something. What you can (2) _____ from this statement is that teachers live by selling knowledge, philosophers live by selling wisdom and priests earn their living by selling spiritual comfort. Though it may be possible to measure the value of material goods in terms of money, it is extremely difficult to (3) _____ the true value of the services which people perform for us. There are times when we would (4) _____ give everything we possess to save our lives, yet we might grudge paying a surgeon a high fee for offering us precisely the same service. The (5) _____ of society are such that skills have to be paid for in the same way that goods are paid for at a shop.

SubQuestionNo:45

Q.45 Select the most appropriate option to fill in blank number 5. Ans

- 1. obstacles
- 2. interferences
- 3. conditions
- 4. connections

QuestionID:264330163290

Option1ID:264330640466

Option2ID:264330640463

Option3ID:264330640465

Option4ID:264330640464

Status:Answered

ChosenOption: 3

Comprehension:

Read the given passage carefully and answer the questions that follow.

As a society, we have come a long way in terms of progress and development. We have eradicated diseases, explored space, and created technological wonders that were once thought impossible. Yet, there is still one issue that continues to plague us: stupidity. Yes, stupidity. The thing that seems to be contagious and has been spreading faster than the common cold. It's everywhere you look - on social media, in politics, in the workplace. You can't escape it.

It's as if we've all collectively decided that intelligence and common sense are no longer important. Why bother using your brain when you can just rely on your gut feelings and conspiracy theories?

Take politics, for example. It used to be that politicians were expected to be knowledgeable and well-informed about the issues they were dealing with. Now, it seems that all you need is a catchy slogan and some empty promises to win an election.

And don't even get me started on social media. It's a breeding ground for stupidity. People will believe anything they read as long as it confirms their preconceived biases. And don't even think about trying to present them with actual facts and evidence. That's just a waste of time.

But it's not just individuals who are to blame for this epidemic of stupidity. Our education system is failing us as well. We're teaching our kids how to pass tests instead of how to think critically and solve problems. It's no wonder we have a generation of adults who can't even find their way around a basic math problem.

Of course, there are some who would argue that stupidity is just a different way of thinking.

That's a valid perspective that deserves to be respected. To those people, I say this: if you want to be stupid, go ahead. Just don't expect the rest of us to respect your opinions when they're based on nothing but ignorance and misinformation.

It's time for us to take a stand against stupidity. We need to start valuing intelligence and critical thinking again. We need to hold our leaders accountable for their actions and demand that they be knowledgeable and well-informed. We need to teach our children how to think, not just how to memorise.

It won't be easy, but it's a fight worth fighting. Because if we don't, we'll be stuck in a world where stupidity reigns supreme, and there's no telling what kind of damage that could do. So let's all do our part and start using our brains again. It's time to put an end to the epidemic of stupidity once and for all.

Sub Question No: 46

Q.46 Which of the following techniques has been used by the author of the passage to convey the message?

- Ans
- 1. Examples and anecdotes
 - 2. Factual and chronological account
 - 3. Humour and exaggeration
 - 4. Parody and mimicry

QuestionID:264330165143

Option1ID:264330647677

Option2ID:264330647675

Option3ID:264330647676

Option4ID:264330647678

Status: Answered

Chosen Option: 1

Comprehension:

Read the given passage carefully and answer the questions that follow.

As a society, we have come a long way in terms of progress and development. We have eradicated diseases, explored space, and created technological wonders that were once thought impossible. Yet, there is still one issue that continues to plague us: stupidity. Yes, stupidity. The thing that seems to be contagious and has been spreading faster than the common cold. It's everywhere you look - on social media, in politics, in the workplace. You can't escape it.

It's as if we've all collectively decided that intelligence and common sense are no longer important. Why bother using your brain when you can just rely on your gut feelings and conspiracy theories?

Take politics, for example. It used to be that politicians were expected to be knowledgeable and well-informed about the issues they were dealing with. Now, it seems that all you need is a catchy slogan and some empty promises to win an election.

And don't even get me started on social media. It's a breeding ground for stupidity. People will believe anything they read as long as it confirms their preconceived biases. And don't even think about trying to present them with actual facts and evidence. That's just a waste of time.

But it's not just individuals who are to blame for this epidemic of stupidity. Our education system is failing us as well. We're teaching our kids how to pass tests instead of how to think critically and solve problems. It's no wonder we have a generation of adults who can't even find their way around a basic math problem.

Of course, there are some who would argue that stupidity is just a different way of thinking.

That's a valid perspective that deserves to be respected. To those people, I say this: if you want to be stupid, go ahead. Just don't expect the rest of us to respect your opinions when they're based on nothing but ignorance and misinformation.

It's time for us to take a stand against stupidity. We need to start valuing intelligence and critical thinking again. We need to hold our leaders accountable for their actions and demand that they be knowledgeable and well-informed. We need to teach our children how to think, not just how to memorise.

It won't be easy, but it's a fight worth fighting. Because if we don't, we'll be stuck in a world where stupidity reigns supreme, and there's no telling what kind of damage that could do. So let's all do our part and start using our brains again. It's time to put an end to the epidemic of stupidity once and for all.

Sub Question No: 47

Q.47 According to the passage, what is the solution to the issue of stupidity in society? Ans 

1. Embracing ignorance and misinformation

 2. Teaching students how to pass tests

 3. Electing politicians with catchy slogans

 4. Encouraging critical thinking and problem-solving skills

Question ID: 264330165142

Option 1 ID: 264330647671

Option 2 ID: 264330647673

Option 3 ID: 264330647674

Option 4 ID: 264330647672

Status: Answered

Chosen Option: 4

Comprehension:

Read the given passage carefully and answer the questions that follow.

As a society, we have come a long way in terms of progress and development. We have eradicated diseases, explored space, and created technological wonders that were once thought impossible. Yet, there is still one issue that continues to plague us: stupidity. Yes, stupidity. The thing that seems to be contagious and has been spreading faster than the common cold. It's everywhere you look - on social media, in politics, in the workplace. You can't escape it.

It's as if we've all collectively decided that intelligence and common sense are no longer important. Why bother using your brain when you can just rely on your gut feelings and conspiracy theories?

Take politics, for example. It used to be that politicians were expected to be knowledgeable and well-informed about the issues they were dealing with. Now, it seems that all you need is a catchy slogan and some empty promises to win an election.

And don't even get me started on social media. It's a breeding ground for stupidity. People will believe anything they read as long as it confirms their preconceived biases. And don't even think about trying to present them with actual facts and evidence. That's just a waste of time.

But it's not just individuals who are to blame for this epidemic of stupidity. Our education system is failing us as well. We're teaching our kids how to pass tests instead of how to think critically and solve problems. It's no wonder we have a generation of adults who can't even find their way around a basic math problem.

Of course, there are some who would argue that stupidity is just a different way of thinking.

That's a valid perspective that deserves to be respected. To those people, I say this: if you want to be stupid, go ahead. Just don't expect the rest of us to respect your opinions when they're based on nothing but ignorance and misinformation.

It's time for us to take a stand against stupidity. We need to start valuing intelligence and critical thinking again. We need to hold our leaders accountable for their actions and demand that they be knowledgeable and well-informed. We need to teach our children how to think, not just how to memorise.

It won't be easy, but it's a fight worth fighting. Because if we don't, we'll be stuck in a world where stupidity reigns supreme, and there's no telling what kind of damage that could do. So let's all do our part and start using our brains again. It's time to put an end to the epidemic of stupidity once and for all.

Sub Question No: 48

Q.48 What is the tone of the passage? Ans

- 1. Sarcastic
- 2. Serious
- 3. Melancholic
- 4. Joyful

Question ID: 264330165139

Option 1 ID: 264330647660

Option 2 ID: 264330647661

Option 3 ID: 264330647662

Option 4 ID: 264330647659

Status: Answered

Chosen Option: 3

Comprehension:

Read the given passage carefully and answer the questions that follow.

As a society, we have come a long way in terms of progress and development. We have eradicated diseases, explored space, and created technological wonders that were once thought impossible. Yet, there is still one issue that continues to plague us: stupidity. Yes, stupidity. The thing that seems to be contagious and has been spreading faster than the common cold. It's everywhere you look - on social media, in politics, in the workplace. You can't escape it.

It's as if we've all collectively decided that intelligence and common sense are no longer important. Why bother using your brain when you can just rely on your gut feelings and conspiracy theories?

Take politics, for example. It used to be that politicians were expected to be knowledgeable and well-informed about the issues they were dealing with. Now, it seems that all you need is a catchy slogan and some empty promises to win an election.

And don't even get me started on social media. It's a breeding ground for stupidity. People will believe anything they read as long as it confirms their preconceived biases. And don't even think about trying to present them with actual facts and evidence. That's just a waste of time.

But it's not just individuals who are to blame for this epidemic of stupidity. Our education system is failing us as well. We're teaching our kids how to pass tests instead of how to think critically and solve problems. It's no wonder we have a generation of adults who can't even find their way around a basic math problem.

Of course, there are some who would argue that stupidity is just a different way of thinking. That it's a valid perspective that deserves to be respected. To those people, I say this: if you want to be stupid, go ahead. Just don't expect the rest of us to respect your opinions when they're based on nothing but ignorance and misinformation.

It's time for us to take a stand against stupidity. We need to start valuing intelligence and critical thinking again. We need to hold our leaders accountable for their actions and demand that they be knowledgeable and well-informed. We need to teach our children how to think, not just how to memorise.

It won't be easy, but it's a fight worth fighting. Because if we don't, we'll be stuck in a world where stupidity reigns supreme, and there's no telling what kind of damage that could do. So let's all do our part and start using our brains again. It's time to put an end to the epidemic of stupidity once and for all.

Sub Question No: 49

Q.49 According to the author of the passage, who among the following is NOT responsible for the spread of stupidity?

- Ans
- 1. Politicians
 - 2. Education system
 - 3. Individuals
 - 4. Children

Question ID: 264330165140

Option 1 ID: 264330647664

Option 2 ID: 264330647665

Option 3 ID: 264330647663

Option 4 ID: 264330647666

Status: Answered

Chosen Option: 4

Comprehension:

Read the given passage carefully and answer the questions that follow.

As a society, we have come a long way in terms of progress and development. We have eradicated diseases, explored space, and created technological wonders that were once thought impossible. Yet, there is still one issue that continues to plague us: stupidity. Yes, stupidity. The thing that seems to be contagious and has been spreading faster than the common cold. It's everywhere you look - on social media, in politics, in the workplace. You can't escape it.

It's as if we've all collectively decided that intelligence and common sense are no longer important. Why bother using your brain when you can just rely on your gut feelings and conspiracy theories?

Take politics, for example. It used to be that politicians were expected to be knowledgeable and well-informed about the issues they were dealing with. Now, it seems that all you need is a catchy slogan and some empty promises to win an election.

And don't even get me started on social media. It's a breeding ground for stupidity. People will believe anything they read as long as it confirms their preconceived biases. And don't even think about trying to present them with actual facts and evidence. That's just a waste of time.

But it's not just individuals who are to blame for this epidemic of stupidity. Our education system is failing us as well. We're teaching our kids how to pass tests instead of how to think critically and solve problems. It's no wonder we have a generation of adults who can't even find their way around a basic math problem.

Of course, there are some who would argue that stupidity is just a different way of thinking. That it's a valid perspective that deserves to be respected. To those people, I say this: if you want to be stupid, go ahead. Just don't expect the rest of us to respect your opinions when they're based on nothing but ignorance and misinformation.

It's time for us to take a stand against stupidity. We need to start valuing intelligence and critical thinking again. We need to hold our leaders accountable for their actions and demand that they be knowledgeable and well-informed. We need to teach our children how to think, not just how to memorise.

It won't be easy, but it's a fight worth fighting. Because if we don't, we'll be stuck in a world where stupidity reigns supreme, and there's no telling what kind of damage that could do. So let's all do our part and start using our brains again. It's time to put an end to the epidemic of stupidity once and for all.

Sub Question No: 50

Q.50 What could be a suitable title for the passage? Ans

- 1. The Evils of Social Media
- 2. The Benefits of Stupidity
- 3. The Joy of Living in a World of Ignorance
- 4. The Importance of Critical Thinking

Question ID: 264330165141

Option 1 ID: 264330647667

Option 2 ID: 264330647668

Option 3 ID: 264330647670

Option 4 ID: 264330647669

Status: Answered

Chosen Option: 4