

SSCCPOOct04,2023Shift3QuestionPaper

Roll Number	
Candidate Name	
VenueName	
Exam Date	04/10/2023
Exam Time	4:00 PM - 6:00 PM
Subject	SICPO Paper I 2023

Section:GeneralIntelligenceandReasoning

In certain code language, 'ACTION' is written as 'TXANLI' and 'DEBATE' is written as 'BVDEGA'.
How will 'CHANGE' be written in that language?

- Ans
- 1. ATHFN
 - 2. HRPEIU
 - 3. BJDLER
 - 4. ASCETN

QuestionID:26433074764
Option1ID:264330293144
Option2ID:264330293145
Option3ID:264330293147
Option4ID:264330293146
Status:Answered
ChosenOption: 4

Q.2 Which of the following numbers will replace the question mark (?) in the given series?

38, 57, 40, 59, 42, ?

- Ans
- 1. 59
 - 2. 62
 - 3. 60
 - 4. 61

QuestionID:26433057339
Option1ID:264330224340
Option2ID:264330224343
Option3ID:264330224341
Option4ID:264330224342
Status:Answered
ChosenOption: 4

Q.3 Which of the following numbers will replace the question mark (?) in the given series? 112, 129, 150, 175, 204, ?

- Ans
- 1. 240
 - 2. 234
 - 3. 237
 - 4. 245

QuestionID:26433067867
Option1ID:264330265980
Option2ID:264330265981
Option3ID:264330265982
Option4ID:264330265983
Status:Answered
ChosenOption: 3

Q.4 In a certain code language, 'COACH' is coded as XAOHC and 'BERTH' is coded as WREHT. How will 'TRAIN' be coded in the same language?

- Ans 1. OARNI
 2. PARNI
 3. PARIN
 4. ONIAR

QuestionID:264330132209

Option1ID:264330517934

Option2ID:264330517931

Option3ID:264330517933

Option4ID:264330517932

Status:Answered

ChosenOption: 1

Q.5 If '+' means '-', '-' means 'x', 'x' means '÷' and '÷' means '+', what will come in place of '?' in the following equation?
 $121 \times 11 \div 28 - 3 + 46 = ?$

- Ans 1. 49
 2. 43
 3. 65
 4. 71

QuestionID:264330101148

Option1ID:264330397140

Option2ID:264330397137

Option3ID:264330397138

Option4ID:264330397139

Status:Answered

ChosenOption: 1

Q.6 Which of the following terms will replace the question mark (?) in the given series?

LDEA NGIF ? RMQP TPUU

- Ans 1. PMJK
 2. PIMK
 3. PMIK
 4. PJMK

QuestionID:26433085319

Option1ID:264330334980

Option2ID:264330334977

Option3ID:264330334979

Option4ID:264330334978

Status:Answered

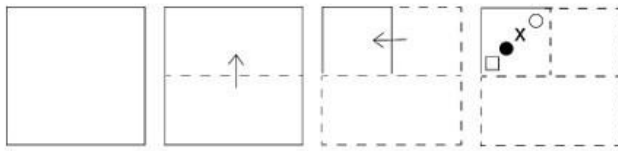
ChosenOption: 4

Q.7 If '+' means '-', '-' means 'x', 'x' means '÷' and '÷' means '+', then what will come in place of (?) in the given equation?
 $30 + 5 - 2 \times 10 \div 2 = ?$

- Ans
- 1. 50
 - 2. 31
 - 3. 80
 - 4. 60

QuestionID:264330106671
 Option1ID:264330418985
 Option2ID:264330418986
 Option3ID:264330418988
 Option4ID:264330418987
 Status:Answered
 ChosenOption: 2

Q.8 A paper is folded and cut as shown below. How will it appear when unfolded?



Ans

- 1.
- 2.
- 3.
- 4.

QuestionID:264330103007
 Option1ID:264330404418
 Option2ID:264330404417
 Option3ID:264330404419
 Option4ID:264330404420
 Status:Answered
 ChosenOption: 2

Q.9 In a certain code language, 'HORSE' is coded as 75 and 'MOVE' is coded as 63. How will 'RACE' be coded in that language?

- Ans
- 1. 46
 - 2. 32
 - 3. 48
 - 4. 35

QuestionID:26433074708

Option1ID:264330292922

Option2ID:264330292920

Option3ID:264330292923

Option4ID:264330292921

Status:Answered

ChosenOption: 4

Q.10 उस विवक का चयन कीजिए, जो तीसरे शब्द से उसी प्रकार संबंधित है, जिस प्रकार दूसरा शब्द पहले शब्द से संबंधित है। (शब्दों को अथवा पूर्ण शब्दों के समानाजाना चाहिए, और वह शब्द अर्थों की संख्या/दिशा/रंग/संख्या के आधार पर एक-दूसरे से संबंधित नहीं होना चाहिए।)

आह(Alas):शोक(woe)::सुंदरता(Beauty):?

- Ans
- 1. मिटाना (Expunge)
 - 2. असुवृत्ता (Inelegance)
 - 3. असतता (Crudeness)
 - 4. आकर्षण (Charm)

QuestionID:264330145403

Option1ID:264330569870

Option2ID:264330569867

Option3ID:264330569869

Option4ID:264330569868

Status:Answered

ChosenOption: 4

Q.11 Sonagoestoaparkeverydayforwalking.Onemorning,shestartedwalkingfromher homeandwalked40kmtowardsthenorth.Thensheturnedtotherightandwalked60 km.Again, she turned right and walked 40 km. Lastly, she took a left turn and walked 60 km. In which direction and how far is she from her home?

- Ans
- 1. East, 90 km
 - 2. West, 120km
 - 3. West, 60km
 - 4. East, 120km

QuestionID:26433097223

Option1ID:264330381590

Option2ID:264330381591

Option3ID:264330381589

Option4ID:264330381592

Status:Answered

ChosenOption: 4

Q.12 Which of the following numbers will replace the question mark (?) in the given series?

3, 5, 7, 12, 37, 69, 357, ?

Ans 1. 656

2. 645

3. 665

4. 654

QuestionID:264330145294

Option1ID:264330569432

Option2ID:264330569433

Option3ID:264330569431

Option4ID:264330569434

Status: **Not Attempted and Marked For Review**

ChosenOption:--

Q.13 Three Statements are given followed by Three conclusions numbered I, II and III.

Assuming the statements to be true, even if they seem to be at variance with commonly known facts, decide which of the conclusions logically follow(s) from the statements.

Statements:

All plains are mountains.

No sea is a mountain.

Some valleys are seas.

Conclusions:

I. Some valleys are plains.

II. No valley is a mountain.

III. No sea is a plain.

Ans 1. Only conclusion III follows.

2. Only conclusion II follows.

3. Both conclusions I and II follow.

4. Only conclusion I follows.

QuestionID:264330145340

Option1ID:264330569616

Option2ID:264330569617

Option3ID:264330569615

Option4ID:264330569618

Status: **Answered**

ChosenOption: 1

Q.14 Select the option that represents the letter that, when placed from left to right in the blanks below, will complete the letter series.

P _ RR _ PQ _ _ S _ QR _ SP _ RRS Ans

1. R Q P Q R S Q

2. S Q R R Q P R

3. S Q R R P Q

4. Q S R R P R Q

QuestionID:264330180746

Option1ID:264330708954

Option2ID:264330708951

Option3ID:264330708953

Option4ID:264330708952

Status: **Answered**

ChosenOption: 4

Q.15 If A denotes '+', B denotes 'x', C denotes '-', and D denotes '÷', then what will be the value of the following equation?
 $16B5A112D8C32=?$

- Ans
- 1. 65
 - 2. 72
 - 3. 62
 - 4. 57

QuestionID:264330129783
Option1ID:264330508364
Option2ID:264330508365
Option3ID:264330508366
Option4ID:264330508363
Status:Answered
ChosenOption: 3

Q.16 Six students Shree, Dayal, Sharda, Tripti, Shrishti and Manju are sitting around a circular table facing the centre (not necessarily in the same order). Shree is an immediate neighbour of both Dayal and Tripti. Manju is sitting second to the right of Dayal. Shrishti is an immediate neighbour of both Manju and Tripti. Who is an immediate neighbour of Sharda?

- Ans
- 1. Dayal
 - 2. Shree
 - 3. Tripti
 - 4. Shrishti

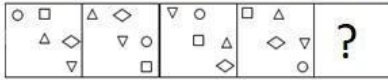
QuestionID:26433082278
Option1ID:264330322946
Option2ID:264330322945
Option3ID:264330322947
Option4ID:264330322948
Status:Answered
ChosenOption: 1

Q.17 Select the option that is related to the fourth term in the same way as the first term is related to the second term and the fifth term is related to the sixth term.
 $2:26::?:152::27:1026$

- Ans
- 1. 6
 - 2. 8
 - 3. 24
 - 4. 13

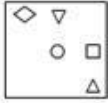
QuestionID:26433079358
Option1ID:264330311421
Option2ID:264330311422
Option3ID:264330311423
Option4ID:264330311420
Status:Answered
ChosenOption: 2

Q.18 Select the figure that will replace the question mark (?) in the following figure series.



Ans

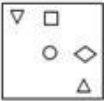
✓1.



✗2.



✗3.



✗4.



QuestionID:264330145491

Option1ID:264330570220

Option2ID:264330570219

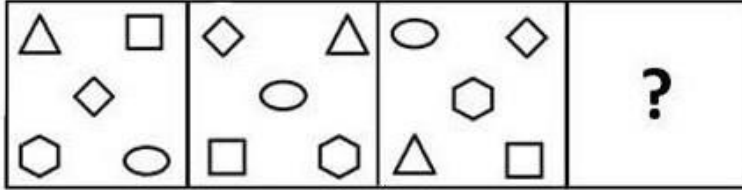
Option3ID:264330570222

Option4ID:264330570221

Status:Answered

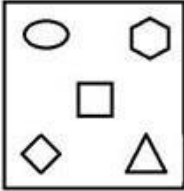
ChosenOption: 1

Q.19 Select a suitable figure from the answer figures which would replace the question mark (?).

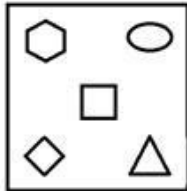


Ans

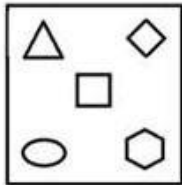
✗1.



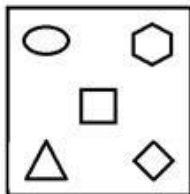
✓2.



✗3.



✗4.



QuestionID:26433066046

Option1ID:264330258728

Option2ID:264330258729

Option3ID:264330258731

Option4ID:264330258730

Status:Answered

ChosenOption: 2

Q.20 If '+' means '-', '-' means 'x', 'x' means '+' and '÷' means '+', what will come in place of '?' in the following equation?

$$83 \div 12 - 65 \times 13 + 47 = ?$$

Ans ✗1. 92

✓2. 96

✗3. 79

✗4. 108

QuestionID:264330101151

Option1ID:264330397149

Option2ID:264330397151

Option3ID:264330397152

Option4ID:264330397150

Status:Answered

ChosenOption: 2

Q.21 In a certain code language, "GBTA" is coded as "24" and "ZWQVI" is coded as "30". How will "DLUCPR" be coded in that language?

- Ans
- 1. 30
 - 2. 28
 - 3. 24
 - 4. 36

QuestionID:264330132245

Option1ID:264330518077

Option2ID:264330518075

Option3ID:264330518076

Option4ID:264330518078

Status:Answered

ChosenOption: 4

Q.22 In this question, three statements are given, followed by two conclusions numbered I and II. Assuming the statements to be true, even if they seem to be at variance with commonly known facts, decide which of the conclusions logically follows/follow from the statements.

Statements:

I. Some rooms are cages.

II. Some cages are enclosures.

III. All enclosures are houses.

Conclusions:

I. Some houses are cages.

II. All rooms are enclosures.

- Ans
- 1. Both conclusions I and II follow
 - 2. Only conclusion I follows
 - 3. Neither conclusion I nor II follows
 - 4. Only conclusion II follows

QuestionID:264330104077

Option1ID:264330408611

Option2ID:264330408609

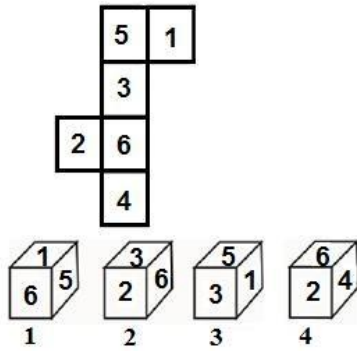
Option3ID:264330408612

Option4ID:264330408610

Status:Answered

ChosenOption: 2

Q.23 If the given sheet is folded to form a cube, which of the given figures are possible?
(The numbers are shown to indicate the sides only.)



- Ans 1. All 1, 2, 3 and 4
 2. Only 2 and 3
 3. Only 1, 2 and 3
 4. Only 2, 3 and 4

QuestionID:26433065673

Option1ID:264330257252

Option2ID:264330257254

Option3ID:264330257253

Option4ID:264330257255

Status: Answered

ChosenOption: 4

Q.24 If '+' means '-', '-' means 'x', 'x' means '+', and '÷' means '+', then what will come in place of the question mark (?) in the following equation?
 $14 - 7 \div 4 \times 6 + 33 = ?$

- Ans 1. 72
 2. 84
 3. 68
 4. 56

QuestionID:264330126056

Option1ID:264330493899

Option2ID:264330493896

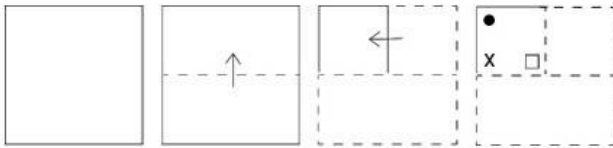
Option3ID:264330493898

Option4ID:264330493897

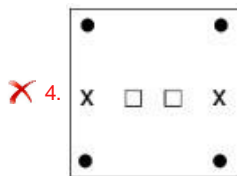
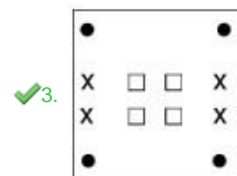
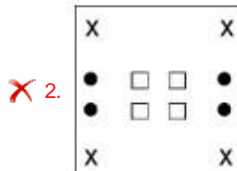
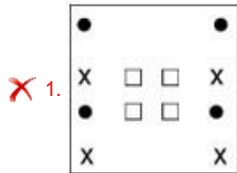
Status: Answered

ChosenOption: 1

Q.25 A paper is folded and cut as shown below. How will it appear when unfolded?



Ans



QuestionID:264330103005

Option1ID:264330404411

Option2ID:264330404410

Option3ID:264330404412

Option4ID:264330404409

Status:Answered

ChosenOption: 3

Q.26 Two statements are given, followed by two conclusions numbered I and II. Assuming the statements to be true, even if they seem to be at variance with commonly known facts, decide which of the conclusions logically follow(s) from the statements. Statements:

All kids are small.

Some funny are kids.

Conclusions:

I) Some funny are small.

II) Some small are kids.

Ans ✗ 1. Only Conclusion I follows

✓ 2. Both Conclusions I and II follow.

✗ 3. Only Conclusion II follows.

✗ 4. Neither Conclusion I nor II follows.

QuestionID:26433067703

Option1ID:264330265324

Option2ID:264330265326

Option3ID:264330265325

Option4ID:264330265327

Status:Answered

ChosenOption: 2

Q.27 Select the option that represents the correct order of the given words as they would appear in an English dictionary?

1. Puritan
2. Purpose
3. Purge
4. Purgatory
5. Purify

Ans 1.3,4,5,1,2

2.5,4,3,1,2

3.4,5,3,1,2

4.4,3,5,1,2

QuestionID:26433067242

Option1ID:264330263483

Option2ID:264330263480

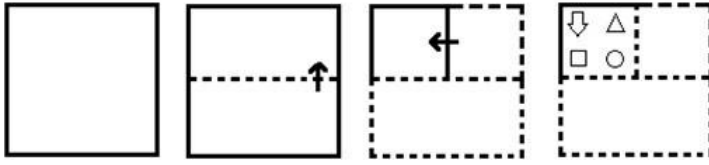
Option3ID:264330263482

Option4ID:264330263481

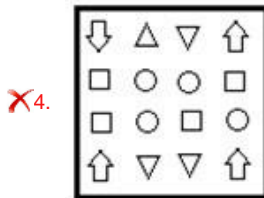
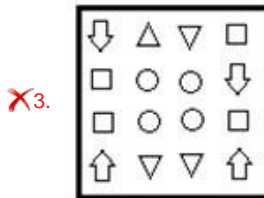
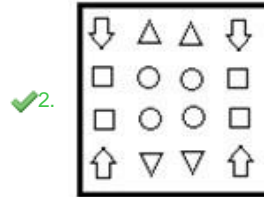
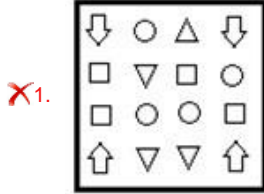
Status: Answered

ChosenOption: 4

Q.28 The sequence of folding a piece of paper and the manner in which the folded paper is cut is shown in the following figures. How would this paper look when unfolded?



Ans



QuestionID:26433074794

Option1ID:264330293264

Option2ID:264330293266

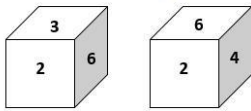
Option3ID:264330293267

Option4ID:264330293265

Status:Answered

ChosenOption: 2

Q.29 Two different positions of the same dice are shown, the six faces of which are numbered from 1 to 6. Select the number that will be on the face opposite to the one showing '4'.



- Ans
- 1.5
 - 2.1
 - 3.3
 - 4.6

QuestionID:26433058065

Option1ID:264330227244

Option2ID:264330227245

Option3ID:264330227246

Option4ID:264330227247

Status:Answered

ChosenOption: 3

Q.30 उसिक्काचयनकर, जोतीसरेशसेउसीकारसंबंधितहै, जिसकारदूसराशपहलेश सेसंबंधितहै।(शोकोअथपूणशोकेममानाजानाचाहिए, औरइनकोशमअरोंकी सं%ा/Dंजनो/4रोंकीस%ाकेआधारपरएक-दूसरेसे संबंधितनहींिकयाजानाचाहिए।) लेल(Whale):नपायी(Mammal)::मगरम(Crocodile):?

- Ans
- 1. कृंतक (Rodent)
 - 2. उभयचर(Amphibian)
 - 3. समु5(Sea)
 - 4. सरीसृप(Reptile)

QuestionID:26433091600

Option1ID:264330359766

Option2ID:264330359765

Option3ID:264330359768

Option4ID:264330359767

Status:Answered

ChosenOption: 4

Q.31X, from his house, ran 200 steps towards the east and then ran 30 steps after turning to his right to reach a monastery. He then ran 30 steps towards his right and reached a point W. He then turned again towards his right and ran 30 steps. From there, turning towards his right he ran 130 steps. He then turned towards his left and ran 10 steps to reach a bakery. In which direction is the bakery with respect to X's house?

- Ans
- 1. East
 - 2. South-East
 - 3. North-East
 - 4. North

QuestionID:26433057309

Option1ID:264330224221

Option2ID:264330224223

Option3ID:264330224222

Option4ID:264330224220

Status:Answered

ChosenOption: 3

Q.32 Four letter-clusters have been given, out of which three are alike in some manner and one is different. Select the odd letter-cluster.

- Ans 1. NJPM
 2. EAFD
 3. VRWU
 4. LHMK

QuestionID:264330180755

Option1ID:264330708990

Option2ID:264330708987

Option3ID:264330708989

Option4ID:264330708988

Status:Answered

ChosenOption: 1

Q.33 Select the option that is related to the fourth term in the same way as the first term is related to the second term and the fifth term is related to the sixth term.
5:24::?:143::4:15

- Ans 1. 7
 2. 12
 3. 8
 4. 11

QuestionID:26433079355

Option1ID:264330311408

Option2ID:264330311410

Option3ID:264330311409

Option4ID:264330311411

Status:Answered

ChosenOption: 2

Q.34 If '+' means 'divided by', '=' means 'added to', 'x' means 'subtracted from' and '÷' means 'multiplied by', then what will be the value of the following expression?

$$[{\{(23 \times 15) - (2 \div 2)\} + (2 - 4)}] \div 2$$

- Ans 1. 8
 2. 2
 3. 6
 4. 4

QuestionID:264330130376

Option1ID:264330510618

Option2ID:264330510615

Option3ID:264330510617

Option4ID:264330510616

Status:Answered

ChosenOption: 4

Q.35 Which of the following numbers will replace the question mark (?) in the given series? 261, 232, 203, ?, 145, 116

- Ans
- 1. 174
 - 2. 188
 - 3. 192
 - 4. 186

QuestionID:26433067625

Option1ID:264330265013

Option2ID:264330265015

Option3ID:264330265014

Option4ID:264330265012

Status:Answered

ChosenOption: 1

Q.36 In a certain code language, 'HUSTLE' is written as 'SFHEOT' and 'BRIGHT' is written as 'IIBTSG'. How will 'TUNNEL' be written in that language?

- Ans
- 1. NRTPEN
 - 2. NGTYPN
 - 3. NFTLVN
 - 4. RNLPED

QuestionID:26433074761

Option1ID:264330293134

Option2ID:264330293132

Option3ID:264330293133


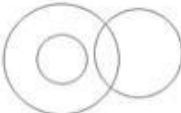
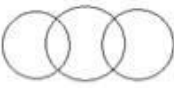

Option4ID:264330293135

Status:Answered

ChosenOption: 3

Q.37 Select the Venn diagram that best illustrates the relationship between the following classes.

Spoon, Soup, Rice

- Ans
- 1. 
 - 2. 
 - 3. 
 - 4. 

QuestionID:264330145360

Option1ID:264330569697

Option2ID:264330569698

Option3ID:264330569695

Option4ID:264330569696

Status:Answered

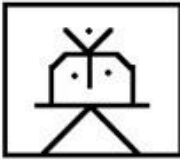
ChosenOption: 1

Q.38 Select the option figure in which the given figure is embedded as its part (rotation is NOT allowed).

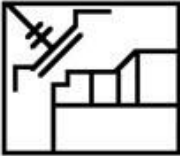


Ans

✗ 1.



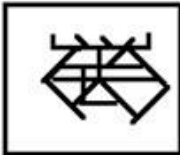
✗ 2.



✗ 3.



✓ 4.



QuestionID:264330117423

Option1ID:264330461734

Option2ID:264330461736

Option3ID:264330461735

Option4ID:264330461733

Status: Answered

ChosenOption: 4

Q.39 'P\$Q' means 'P is the daughter of Q' 'P ?

Q' means 'P is the son of Q'

'P*Q' means 'P is the sister of Q'

'P=Q' means 'P is the father of Q'

If 'D\$G*U?F', how is G related to F?

Ans ✗ 1. Father's sister

✗ 2. Mother's sister

✗ 3. Brother

✓ 4. Daughter

QuestionID:26433090231

Option1ID:264330354402

Option2ID:264330354401

Option3ID:264330354404

Option4ID:264330354403

Status: Answered

ChosenOption: 4

Q.40 Select the set in which the numbers are related in the same way as are the numbers of the following sets.
(NOTE : Operations should be performed on the whole numbers, without breaking down the numbers into its constituent digits. E.g. 13-Operation on 13 such as adding /subtracting/multiplying etc. to 13 can be performed. Breaking down 13 into 1 and 3 and then performing mathematical operations on 1 and 3 is not allowed.)

(13,18,21)
(11,25,8)

- Ans 1. (6, 10, 12)
 2. (4, 12, 24)
 3. (8, 16, 23)
 4. (14,33,9)

QuestionID:26433057438
Option1ID:264330224739
Option2ID:264330224737
Option3ID:264330224738
Option4ID:264330224736

Status:Answered
ChosenOption: 4

Q.41 Which two signs should be interchanged to make the given equation correct? $31 \div 48$
 $\times 7 - 322 + 23 = 353$

- Ans 1. \div and $-$
 2. $-$ and \times
 3. \times and $+$
 4. \div and $+$

QuestionID:264330129527
Option1ID:264330507474
Option2ID:264330507477
Option3ID:264330507476
Option4ID:264330507475

Status:Answered
ChosenOption: 4

Q.42 Seven students A, B, C, D, E, F and G are sitting around a circular table facing the centre. C is an immediate neighbour of both E and F. D is sitting third to the left of C and to the immediate right of A. A is sitting second to the right of E. B is an immediate neighbour of both E and A. G is to the immediate left of F. Who is the immediate neighbour of both C and G?

- Ans 1. E
 2. F
 3. A
 4. D

QuestionID:264330145421
Option1ID:264330569941
Option2ID:264330569939
Option3ID:264330569940
Option4ID:264330569942

Status:Answered
ChosenOption: 2

Q.43 Select the correct option that indicates the arrangement of the given words in the order in which they appear in an English dictionary.

1. Stoop
2. Stoke
3. Storage
4. Stock
5. Storey
6. Stomach

Ans 1.2,4,6,3,1,5
 2.2,4,6,1,3,5
 3.4,2,6,3,1,5
 4.4,2,6,1,3,5

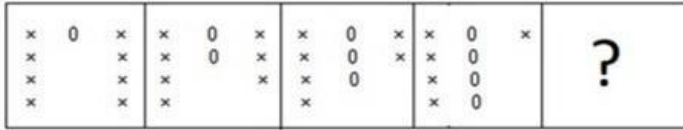
QuestionID:264330145380
Option1ID:264330569775
Option2ID:264330569778
Option3ID:264330569776
Option4ID:264330569777
Status:Answered
ChosenOption: 4

Q.44 Three of the following letter-clusters are alike in some manner and one is different. Select the one that is different.

Ans 1. JEAX
 2. DYUR
 3. WDXC
 4. QLHE

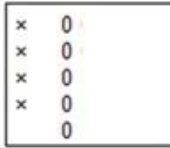
QuestionID:264330145346
Option1ID:264330569641
Option2ID:264330569640
Option3ID:264330569639
Option4ID:264330569642
Status:Answered
ChosenOption: 3

Q.45 Select the figure from among the given options that can replace the question mark (?) in the following series.




Ans

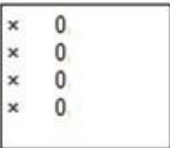
✓1.



✗2.



✗3.



✗4.



QuestionID:26433087153

Option1ID:264330342252

Option2ID:264330342250

Option3ID:264330342251

Option4ID:264330342249

Status:Answered

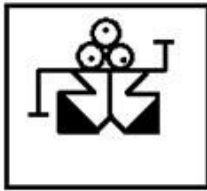
ChosenOption: 1

Q.46 Select the option figure in which the given figure is embedded as its part (rotation is NOT allowed).



Ans

✓1.



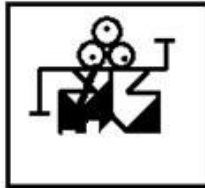
✗2.



✗3.



✗4.



QuestionID:264330117426

Option1ID:264330461746

Option2ID:264330461748

Option3ID:264330461747

Option4ID:264330461745

Status:Answered

ChosenOption: 1

Q.47 Select the set in which the numbers are related in the same way as are the numbers of the following set.

(NOTE : Operations should be performed on the whole numbers, without breaking down the numbers into its constituent digits. E.g. 13 – Operations on 13 such as adding/subtracting/multiplying etc. to 13 can be performed. Breaking down 13 into 1 and 3 and then performing mathematical operations on 1 and 3 is NOT allowed)

(1,16,3)

(21,529,2)

Ans ✗1. (5, 189, 8)

✗2. (7, 364, 12)

✗3. (11, 429, 2)

✓4. (8, 100, 2)

QuestionID:264330145317

Option1ID:264330569524

Option2ID:264330569525

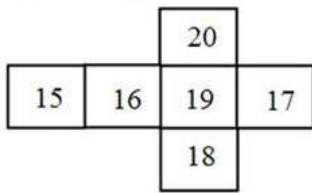
Option3ID:264330569526

Option4ID:264330569523

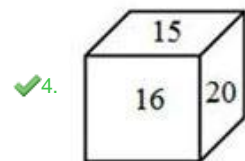
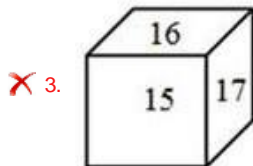
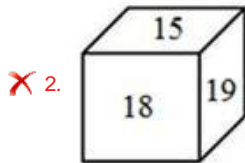
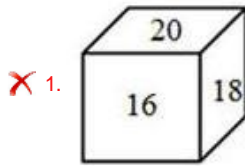
Status:Answered

ChosenOption: 4

Q.48 If the given sheet is folded to form a cube, which of the following figures is possible?



Ans



QuestionID:26433059913

Option1ID:264330234484

Option2ID:264330234487

Option3ID:264330234485

Option4ID:264330234486

Status:Answered

ChosenOption: 4

Q.49 Select the option that represents the letter that, when sequentially placed from left to right in the blanks below, will complete the letter series.

P _ ON _ LB _ NPL _ O _ PL _ N Ans

✓ 1. L B P O B N B O

✗ 2. L B P B O N B O

✗ 3. L P B O B N N O

✗ 4. L B P O B B N O

QuestionID:26433068924

Option1ID:264330270210

Option2ID:264330270211

Option3ID:264330270209

Option4ID:264330270208

Status:Answered

ChosenOption: 1

Q.50A@Bmeans'AisthehusbandofB' A &
B means 'A is the mother of B'
A#Bmeans'AisthedughterofB'
IfL@M&K@J#P,thenhowisJrelatedtoL?

- Ans 1. Son'swife
 2. Daughter'shusband
 3. Mother
 4. Son

QuestionID:264330126022
Option1ID:264330493762
Option2ID:264330493760
Option3ID:264330493763
Option4ID:264330493761
Status:Answered
ChosenOption: 1

Section:GeneralKnowledgeandGeneralAwareness

ChoosetheINCORRECTstatementoutofthefollowing.

- Ans 1. MostpartsofthecountryreceiverrainfallfromJunetoSeptember.
 2. TheannualprecipitationinMeghalayaisover400cm.
 3. SomepartsliketheTamilNadu'scoastgetsalargeportionofitsrainsduringOctober and
November.
 4. ThereisincreaseinrainfallgenerallyfromeasttwestintheNorthernPlains.

QuestionID:264330169313
Option1ID:264330664032
Option2ID:264330664031
Option3ID:264330664033
Option4ID:264330664034
Status:Answered
ChosenOption: 4

Q.2HowmanycitiesarecoveredundertheAtalMissionforRejuvenationandUrban
Transformation (AMRUT) scheme?

- Ans 1. 200
 2. 300
 3. 400
 4. 500

QuestionID:26433064567
Option1ID:264330252863
Option2ID:264330252862
Option3ID:264330252861
Option4ID:264330252860
Status:NotAnswered
ChosenOption:--

Select the correct combination of the temple and the state in which it is located. Ans

- 1. Mahakaleshwar Jyotirlinga–Uttarakhand
- 2. Kamakhya Temple–Assam
- 3. Jagannath Temple–West Bengal
- 4. Somnath Jyotirlinga Temple–Maharashtra

QuestionID:264330141822
Option1ID:264330555608
Option2ID:264330555607
Option3ID:264330555609
Option4ID:264330555610
Status:Answered
ChosenOption: 2

Q.4 The liability to pay the tax and the actual burden of which of the following taxes lie on two different persons?

- Ans
- 1. Corporation Tax
 - 2. Income Tax
 - 3. Capital Gains Tax
 - 4. Goods and Services Tax

QuestionID:264330145240
Option1ID:264330569215
Option2ID:264330569218
Option3ID:264330569216
Option4ID:264330569217
Status:Answered
ChosenOption: 4

Q.5 Which of the following CANNOT be grouped under physiographic divisions of India? Ans

- 1. The Himalayas
- 2. Appalachian Mountains
- 3. The Indian Desert
- 4. The Island

QuestionID:264330163235
Option1ID:264330640252
Option2ID:264330640251
Option3ID:264330640254
Option4ID:264330640253
Status:Not Answered
ChosenOption:--

Q.6 Why do pickles last longer?

- Ans
- 1. Only beneficial bacteria can grow in the pickle.
 - 2. The water content of the pickle protects the pickle from spoilage.
 - 3. Pickle is prepared in a vacuum so that no harmful bacteria can grow on it.
 - 4. Bacterial and fungal cells get plasmolysed in high salt concentration of pickle.

QuestionID:26433089677
Option1ID:264330352209
Option2ID:264330352210
Option3ID:264330352211
Option4ID:264330352212
Status:Answered
ChosenOption: 4

Q.7 When was the Prime Minister's Employment Generation Programme (PMEGP) launched?

Ans 1. 2006

2. 2008

3. 2012

4. 2009

QuestionID:264330157101

Option1ID:264330615776

Option2ID:264330615777

Option3ID:264330615778

Option4ID:264330615775

Status:NotAnswered

ChosenOption:--

Q.8 Which state among the following started the Hornbill Festival to encourage interaction among the tribes and to promote the cultural heritage of the state?

Ans 1. Chhattisgarh

2. WestBengal

3. Assam

4. Nagaland

QuestionID:26433054216

Option1ID:264330211848

Option2ID:264330211851

Option3ID:264330211850

Option4ID:264330211849

Status:Answered

ChosenOption: 4

Q.9 The agricultural land below the main canal water level forms the _____.

Ans 1. flow system

2. liftsystem

3. command area

4. warebandi

QuestionID:264330163192

Option1ID:264330640081

Option2ID:264330640082

Option3ID:264330640079

Option4ID:264330640080

Status:Answered

ChosenOption: 1

Q.10 Identify the pigment that gives blood its colour. Ans

1. Ferritin

2. Chlorophyll

3. Xanthophyll

4. Haemoglobin

QuestionID:26433064753

Option1ID:264330253606

Option2ID:264330253605

Option3ID:264330253604

Option4ID:264330253607

Status:Answered

ChosenOption: 1

Q.11 Who was the teacher of the famous musician Tansen? Ans

- 1. Ravidas
- 2. Swami Haridas
- 3. Kalidas
- 4. Surdas

QuestionID:26433074861
Option1ID:264330293533
Option2ID:264330293535
Option3ID:264330293534
Option4ID:264330293532
Status:Answered
ChosenOption: 4

Q.12 Pandit Ram Narayan a famous instrumentalist, is known for playing which of the following instruments?

- Ans
- 1. Ghatam
 - 2. Veena
 - 3. Sarod
 - 4. Sarangi

QuestionID:264330145168
Option1ID:264330568930
Option2ID:264330568929
Option3ID:264330568927
Option4ID:264330568928
Status:Not Answered
ChosenOption:--

Q.13 Which scientist synthesised an organic compound, urea, from an inorganic compound, ammonium cyanate?

- Ans
- 1. F. Wohler
 - 2. Kolbe
 - 3. Berthelot
 - 4. Berzelius

QuestionID:264330145224
Option1ID:264330569152
Option2ID:264330569153
Option3ID:264330569151
Option4ID:264330569154
Status:Answered
ChosenOption: 1

Q.14 Which of the following is an autobiography of the international tennis player Andre Agassi?

- Ans
- 1. Open: An Autobiography
 - 2. Becoming
 - 3. Too Many Reasons to Live
 - 4. Me

QuestionID:264330145178
Option1ID:264330568969
Option2ID:264330568967
Option3ID:264330568968
Option4ID:264330568970
Status:Not Answered
ChosenOption:--

Q.15 The Bishnu Rabha Award 2019 went to the noted _____ dance exponent Kumari Laitjonam Ebampisok Devi.

- Ans
- 1. Odissi
 - 2. Manipuri
 - 3. Kuchipudi
 - 4. Kathakali

QuestionID:26433054503
Option1ID:264330212999
Option2ID:264330212996
Option3ID:264330212998
Option4ID:264330212997
Status:NotAnswered
ChosenOption:--

Q.16 Which of the following rights was deleted from the list of fundamental rights by the 44th Constitutional Amendment Act?

- Ans
- 1. Right to freedom of religion
 - 2. Right to property
 - 3. Right to freedom
 - 4. Right to equality

QuestionID:264330111521
Option1ID:264330438171
Option2ID:264330438172
Option3ID:264330438170
Option4ID:264330438169
Status:Answered
ChosenOption: 2

Q.17 Which Manipuri dance expert founded Govindji Nartanalaya dance school for women in Imphal ?

- Ans
- 1. Guru Bipin Singh
 - 2. Rajkumar Singhajit Singh
 - 3. Guru Amubi
 - 4. Phanjobam Iboton Singh

QuestionID:26433054508
Option1ID:264330213016
Option2ID:264330213017
Option3ID:264330213018
Option4ID:264330213019
Status:NotAnswered
ChosenOption:--

Q.18 Who was the eldest of four sons of Babur? Ans

- 1. Hindal
- 2. Askari
- 3. Kamran
- 4. Humayun

QuestionID:264330109024
Option1ID:264330428375
Option2ID:264330428374
Option3ID:264330428373
Option4ID:264330428376
Status:NotAnswered
ChosenOption:--

Q.19 As per Article 361 of the Constitution of India, who among the following shall NOT be answerable to any court for the exercise and performance of the powers and duties of his/her office?

- Ans
- 1. Chief Minister
 - 2. Secretary
 - 3. Prime Minister
 - 4. Governor

QuestionID:264330145271
Option1ID:264330569340
Option2ID:264330569342
Option3ID:264330569339
Option4ID:264330569341
Status:Answered
ChosenOption: 4

Q.20 What is the chemical formula for the aldehyde group? Ans

- 1. -COOH
- 2. -OH
- 3. -CH₂O
- 4. -CHO

QuestionID:264330145223
Option1ID:264330569149
Option2ID:264330569148
Option3ID:264330569150
Option4ID:264330569147
Status:Answered
ChosenOption: 4

Q.21 How many balls are there in an over in cricket? Ans

- 1. 4
- 2. 6
- 3. 7
- 4. 5

QuestionID:264330118905
Option1ID:264330466275
Option2ID:264330466277
Option3ID:264330466278
Option4ID:264330466276
Status:Answered
ChosenOption: 2

Q.22 In which year did Ernst Haeckel introduce the term 'ecology' to describe the economies of living forms?

- Ans
- 1. 1888
 - 2. 1884
 - 3. 1887
 - 4. 1866

QuestionID:264330145194
Option1ID:264330569034
Option2ID:264330569031
Option3ID:264330569033
Option4ID:264330569032
Status:Answered
ChosenOption: 4

Q.23 Which schedule of the Constitution of India contains provisions for disqualification of legislator on the ground of defection?

- Ans 1. Schedule-X
 2. Schedule-IX
 3. Schedule-XI
 4. Schedule-VIII

QuestionID:264330130474
Option1ID:264330511008
Option2ID:264330511007
Option3ID:264330511009
Option4ID:264330511010
Status:Answered
ChosenOption: 1

Q.24 When was the first World Weightlifting Championship organized by the World Weightlifting Federation in London, UK?

- Ans 1. March 1891
 2. March 1991
 3. March 2000
 4. March 1895

QuestionID:26433059423
Option1ID:264330232563
Option2ID:264330232560
Option3ID:264330232561
Option4ID:264330232562
Status:NotAnswered
ChosenOption:--

Q.25 Which of the following years was declared as the international year of microcredit by the UN?

- Ans 1. 2008
 2. 2004
 3. 2002
 4. 2005

QuestionID:264330141450
Option1ID:264330554138
Option2ID:264330554136
Option3ID:264330554135
Option4ID:264330554137
Status:NotAnswered
ChosenOption:--

Q.26 Chapchar Kut festival is predominantly celebrated in _____.

- Ans 1. Nagaland
 2. Mizoram
 3. Manipur
 4. Meghalaya

QuestionID:264330164807
Option1ID:264330646357
Option2ID:264330646356
Option3ID:264330646358
Option4ID:264330646355
Status:Answered
ChosenOption: 2

Q.27 The age of the Earth is currently thought to be:

- Ans 1. 4.5 billion years
 2. 4 billion years
 3. 3.5 billion years
 4. 5 billion years

QuestionID:26433064466
Option1ID:264330252457
Option2ID:264330252458
Option3ID:264330252459
Option4ID:264330252456
Status:Not Answered
ChosenOption:--

Q.28 When did the first Five-Year Plan end? Ans

1. March 1956
 2. January 1956
 3. December 1955
 4. February 1956

QuestionID:264330145250
Option1ID:264330569258
Option2ID:264330569256
Option3ID:264330569255
Option4ID:264330569257
Status:Not Answered
ChosenOption:--

Q.29 Which Article of the Constitution clarifies that policies like 'reservation' is not a violation of right to equality?

- Ans 1. Article 16(4)
 2. Article 14(1)
 3. Article 21
 4. Article 15(2)

QuestionID:264330116396
Option1ID:264330457671
Option2ID:264330457669
Option3ID:264330457672
Option4ID:264330457670
Status:Answered
ChosenOption: 1

Q.30 Which of the following is NOT a correct match? Ans

1. Voltage - Volts
 2. Resistance - Ohm
 3. Conductance - Siemens
 4. Capacitance - Dyne

QuestionID:264330111864
Option1ID:264330439543
Option2ID:264330439541
Option3ID:264330439542
Option4ID:264330439544
Status:Answered
ChosenOption: 4

Q.31 Who first observed ribosomes in the mid-1950s and described the mass small particles in the cytoplasm that were preferentially attached to the endoplasmic reticulum membrane?

- Ans
- 1. Ernst Abbe
 - 2. Albert Kolliker
 - 3. Carl Zeiss
 - 4. George E Palade

QuestionID:264330145198
Option1ID:264330569047
Option2ID:264330569050
Option3ID:264330569048
Option4ID:264330569049
Status:NotAnswered
ChosenOption:--

Q.32 Who among the following was the successor of Muhammad-Bin Tughlaq to the throne?

- Ans
- 1. Nais-ud-Din Mahmud Shah Tughlaq
 - 2. Firuz Shah Tughlaq
 - 3. Abu Bakr Shah Tughlaq
 - 4. Ghiyath-ud-din Tughlaq Shah II

QuestionID:26433071394
Option1ID:264330280003
Option2ID:264330280001
Option3ID:264330280000
Option4ID:264330280002
Status:NotAnswered
ChosenOption:--

Q.33 According to the 2011 Census, any person aged _____ and above and has the ability to read and write is considered literate.

- Ans
- 1. twelve
 - 2. six
 - 3. seven
 - 4. ten

QuestionID:264330110656
Option1ID:264330434904
Option2ID:264330434903
Option3ID:264330434902
Option4ID:264330434901
Status:Answered
ChosenOption: 1

Q.34 Kuchipudi originated in which of the following states? Ans

- 1. Kerala
- 2. TamilNadu
- 3. Gujarat
- 4. AndhraPradesh

QuestionID:264330164791
Option1ID:264330646294
Option2ID:264330646293
Option3ID:264330646291
Option4ID:264330646292
Status:Answered
ChosenOption: 1

Q.35 Padma Bhushan awardee Kumudini Lakhia is renowned for which of the following dance forms?

- Ans
- 1. Bharatanatyam
 - 2. Kathak
 - 3. Kuchipudi
 - 4. Odissi

QuestionID:264330145166
Option1ID:264330568919
Option2ID:264330568920
Option3ID:264330568921
Option4ID:264330568922
Status:NotAnswered
ChosenOption:--

Q.36 The black soil of the Deccan Plateau lacks which of the following minerals? Ans

- 1. Phosphorous
- 2. Potash
- 3. Iron
- 4. Lime

QuestionID:264330119790
Option1ID:264330469435
Option2ID:264330469436
Option3ID:264330469437
Option4ID:264330469438
Status:NotAnswered
ChosenOption:--

Q.37 Which Article of the Constitution of India prohibits forced labour? Ans

- 1. Article 23
- 2. Article 21
- 3. Article 22
- 4. Article 20

QuestionID:264330130680
Option1ID:264330511834
Option2ID:264330511832
Option3ID:264330511833
Option4ID:264330511831
Status:Answered
ChosenOption: 1

Q.38 Consider the following statements regarding the Indo Greeks.

1. The most celebrated Indo-Greek ruler was Menander.
 2. Menander has been identified with King Milinda mentioned in the famous Buddhist text Milindapanho.
 3. Milindapanho contains philosophical questions that Milinda asked Amrapali.
 4. Impressed by the answers, King Milinda accepted Buddhism as his religion.
- Which among the above statements are correct.

- Ans
- 1. Only 1, 2 and 3
 - 2. Only 1, 3 and 4
 - 3. Only 1, 2 and 4
 - 4. Only 3, 2 and 4

QuestionID:264330123784

Option1ID:264330485074

Option2ID:264330485075

Option3ID:264330485072

Option4ID:264330485073

Status:Not Answered

ChosenOption:--

Q.39 Which of the following options are homogeneous mixtures?

- Ans
- 1. Solution, colloid, suspension, milk, toothpaste, saltwater, brass
 - 2. Solution, saltwater, brass
 - 3. Solution, colloid, milk, toothpaste, saltwater, brass
 - 4. Colloid, suspension, milk, toothpaste

QuestionID:264330169308

Option1ID:264330664011

Option2ID:264330664013

Option3ID:264330664012

Option4ID:264330664014

Status:Not Answered

ChosenOption:--

Q.40 Match list I to list II.

List I

a) Second Five-year plan

b) Fifth Five-year plan

c) Eight Five-year plan

List II

i) 1974-1979

ii) 1956-1961

iii) 1992-1997

- Ans
- 1. a-iii, b-i, c-ii
 - 2. a-i, b-ii, c-iii
 - 3. a-i, b-iii, c-ii
 - 4. a-ii, b-i, c-iii

QuestionID:264330141495

Option1ID:264330554317

Option2ID:264330554315

Option3ID:264330554318

Option4ID:264330554316

Status:Answered

ChosenOption: 4

Q.41 Which Article of the Indian Constitution lays the condition that the President, once elected, shall NOT be a member of either House of Parliament or state legislature?

- Ans
- 1. Article 62
 - 2. Article 59
 - 3. Article 80
 - 4. Article 79

QuestionID:264330114495
Option1ID:264330450066
Option2ID:264330450065
Option3ID:264330450068
Option4ID:264330450067
Status:Answered
ChosenOption: 2

Q.42 Which of the following books has been written by the Booker Prize winner Kiran Desai?

- Ans
- 1. A Fine Balance
 - 2. The Year of Runaways
 - 3. The Inheritance of Loss
 - 4. Shantaram

QuestionID:26433071482
Option1ID:264330280353
Option2ID:264330280352
Option3ID:264330280355
Option4ID:264330280354
Status:Not Answered
ChosenOption:--

Q.43 Who among the following was NOT associated with 'Prarthana Sabha'? Ans

- 1. Govind Ranade
- 2. Atmaram Pandurang
- 3. R.G. Bhandarkar
- 4. Motilal Nehru

QuestionID:264330165393
Option1ID:264330648651
Option2ID:264330648653
Option3ID:264330648654
Option4ID:264330648652
Status:Answered
ChosenOption: 4

Q.44 Identify the group of major Jute producing states of India. Ans

- 1. Kerala, Tamil Nadu, Telangana, Madhya Pradesh
- 2. West Bengal, Bihar, Assam, Odisha
- 3. Punjab, Haryana, Uttarakhand, Himachal Pradesh
- 4. Rajasthan, Maharashtra, Karnataka, Gujarat

QuestionID:264330113263
Option1ID:264330445140
Option2ID:264330445137
Option3ID:264330445139
Option4ID:264330445138
Status:Answered
ChosenOption: 2

Q.45 Which trend is found about the distance between the galaxies? Ans

- 1. Constant
- 2. Increasing
- 3. Unpredictable
- 4. Decreasing

QuestionID:264330113349
Option1ID:264330445483
Option2ID:264330445481
Option3ID:264330445484
Option4ID:264330445482
Status:NotAnswered
ChosenOption:--

Q.46 Under the Regulating Act of 1773, the King-in-Council created a Supreme Court in which of the following places?

- Ans
- 1. Calcutta
 - 2. Delhi
 - 3. Madras
 - 4. Bombay

QuestionID:26433099166
Option1ID:264330389279
Option2ID:264330389277
Option3ID:264330389280
Option4ID:264330389278
Status:Answered
ChosenOption: 1

Q.47 The Landholder's Society was founded to look after the interests of which class? Ans

- 1. Landlords
- 2. Labour
- 3. Farmers
- 4. Traders

QuestionID:264330112182
Option1ID:264330440814
Option2ID:264330440813
Option3ID:264330440815
Option4ID:264330440816
Status:NotAnswered
ChosenOption:--

Q.48 Which of the following is a primary amine in which an amino functional group is substituted for one of the benzene hydrogens?

- Ans
- 1. Quinoline
 - 2. Aniline
 - 3. Pyridine
 - 4. Toluidine

QuestionID:264330110055
Option1ID:264330432498
Option2ID:264330432500
Option3ID:264330432497
Option4ID:264330432499
Status:NotAnswered
ChosenOption:--

Q.49 Which of the following states will host 2023 Men's Hockey World Cup? Ans

- 1. Chhattisgarh
- 2. Jharkhand
- 3. Maharashtra
- 4. Odisha

QuestionID:264330109848
Option1ID:264330431672
Option2ID:264330431671
Option3ID:264330431670
Option4ID:264330431669
Status:Answered
ChosenOption: 4

Q.50 In football, a kick is awarded to the opposition player when a player has committed a foul. What is the kick called?

- Ans
- 1. Bicycle kick
 - 2. Freekick
 - 3. Widekick
 - 4. Goalkick

QuestionID:26433092339
Option1ID:264330362656
Option2ID:264330362655
Option3ID:264330362653
Option4ID:264330362654
Status:Answered
ChosenOption: 2

Section: Quantitative Aptitude

Q.1 Two mixtures A and B have the following compositions:

Mixture A has copper and tin in a ratio of 1:2

Mixture B has copper and tin in a ratio of 1:3

If equal quantities of mixtures A and B are used for producing mixture C, then find the ratio of copper and tin in mixture C.

- Ans
- 1. 2:5
 - 2. 1:5
 - 3. 7:17
 - 4. 7:12

QuestionID:264330104187
Option1ID:264330409050
Option2ID:264330409049
Option3ID:264330409052
Option4ID:264330409051
Status:Answered
ChosenOption: 4

Q.2 If the volume of a sphere is 38808cm^3 , then its surface area is:

- Ans
- 1. 5554 cm^2
 - 2. 5574 cm^2
 - 3. 5564 cm^2
 - 4. 5544 cm^2

QuestionID:264330145135
Option1ID:264330568796
Option2ID:264330568798
Option3ID:264330568797
Option4ID:264330568795
Status:Answered
ChosenOption: 4

Q.3 The area of a rhombus having one side measuring 17 cm and one diagonal measuring 16 cm is:

- Ans
- 1. 280 cm^2
 - 2. 180 cm^2
 - 3. 240 cm^2
 - 4. 210 cm^2

QuestionID:264330106083
Option1ID:264330416634
Option2ID:264330416633
Option3ID:264330416635
Option4ID:264330416636
Status:Answered
ChosenOption: 3

Q.4 By selling 42 m of cloth, Vijay gains the selling price of 7 m of cloth. Find the profit percentage.

- Ans
- 1. 15%
 - 2. 30%
 - 3. 20%
 - 4. 25%

QuestionID:264330131518
Option1ID:264330515175
Option2ID:264330515178
Option3ID:264330515176
Option4ID:264330515177
Status:Answered
ChosenOption: 3

Q.5 Ramesh gives fifteen percent additional discount along with a discount of 25% on the marked price of a sofa set. If the selling price of the sofa set is ₹12,750, then find the marked price of the sofa set.

- Ans
- ✓ 1. ₹20,000
 - ✗ 2. ₹23,000
 - ✗ 3. ₹22,000
 - ✗ 4. ₹24,000

QuestionID:264330165522

Option1ID:264330649167

Option2ID:264330649169

Option3ID:264330649168

Option4ID:264330649170

Status: Answered

ChosenOption: 1

Q.6 Two pipes can fill a cistern in 12 hours and 16 hours, respectively. The pipes are opened simultaneously and it is found that due to leakage at the bottom, it takes 90 minutes more to fill the cistern. How much time will the leakage take to empty the completely filled tank?

- Ans
- ✗ 1. $36\frac{29}{49}$ h
 - ✓ 2. $38\frac{10}{49}$ h
 - ✗ 3. $39\frac{13}{49}$ h
 - ✗ 4. $37\frac{15}{49}$ h

QuestionID:264330122993

Option1ID:264330482038

Option2ID:264330482036

Option3ID:264330482037

Option4ID:264330482035

Status: Not Attempted and Marked For Review

ChosenOption:--

Q.7 A sum of money amounts to ₹1,200 in 2 years and becomes ₹1,260 in 3 years at compound interest, when interest is compounded annually. What is the rate of compound interest per annum?

- Ans
- ✓ 1. 5%
 - ✗ 2. 3%
 - ✗ 3. 4%
 - ✗ 4. 6%

QuestionID:264330145059

Option1ID:264330568493

Option2ID:264330568491

Option3ID:264330568492

Option4ID:264330568494

Status: Answered

ChosenOption: 1

Q.8 Find the least value of $16\operatorname{cosec}^2\theta + 25\sin^2\theta$. Ans

✓ 1. 40

✗ 2. 42

✗ 3. 35

✗ 4. 38

QuestionID:264330145125

Option1ID:264330568757

Option2ID:264330568758

Option3ID:264330568755

Option4ID:264330568756

Status:Not Answered

ChosenOption:--

Q.9 In a megastore, the following data reveals the units purchased during the years.
What is the percentage growth in total units purchased (of all the three products) from 2015 to 2020?

Year	Tea	Coffee	Cold drink
2015	650	450	1008
2016	730	402	1092
2017	710	354	770
2018	570	438	812
2019	820	390	1043
2020	830	501	1330

Ans ✗ 1. 21.68 percent

✗ 2. 22.75percent

✓ 3. 26.23percent

✗ 4. 25.76percent

QuestionID:26433081647

Option1ID:264330320423

Option2ID:264330320424

Option3ID:264330320421

Option4ID:264330320422

Status:Answered

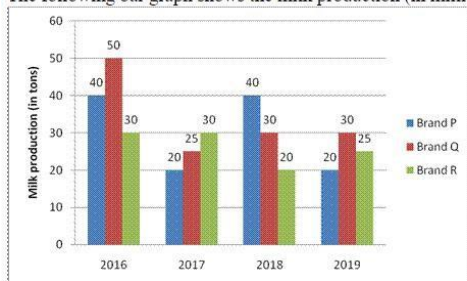
ChosenOption: 3

Q.10 If $\cos A = \frac{1}{11}$, then find the value of $\cot A$.

- Ans
- 1. $\frac{2\sqrt{30}}{11}$
 - 2. $2\sqrt{30}$
 - 3. $\frac{1}{2\sqrt{30}}$
 - 4. $\frac{11}{2\sqrt{30}}$

QuestionID:264330158291
Option1ID:264330620526
Option2ID:264330620525
Option3ID:264330620524
Option4ID:264330620523
Status:Answered
ChosenOption: 3

Q.11 The following bar graph shows the milk production (in million tons) details for 4 years for three brands (P, Q, R):



What was the average production of milk (in million tons) per year over the period of 4 years?

- Ans
- 1. 90
 - 2. 50
 - 3. 30
 - 4. 70

QuestionID:264330158396
Option1ID:264330620946
Option2ID:264330620944
Option3ID:264330620943
Option4ID:264330620945
Status:Answered
ChosenOption: 1

Q.12 If $\sec A + \cot A = 3, 0 \leq A \leq 90^\circ$, then find the value of $\cos A$. Ans

1. $\frac{3}{4}$

2. $\frac{2}{5}$

3. $\frac{3}{5}$

4. $\frac{4}{5}$

QuestionID:264330157759

Option1ID:264330618397

Option2ID:264330618398

Option3ID:264330618395

Option4ID:264330618396

Status:Answered

ChosenOption: 4

Q.13 36 equally efficient workers can paint 25 identical walls in 48 days. In how many days can 45 such workers paint 60 such walls?

Ans 1. 92.36

2. 92.16

3. 91.96

4. 91.16

QuestionID:264330103289

Option1ID:264330405463

Option2ID:264330405464

Option3ID:264330405461

Option4ID:264330405462

Status:Answered

ChosenOption: 2

Q.14 Which of the following numbers leaves the remainder equal to the highest common factor of 6, 8 and 9, when divided by 6, 8 and 9?

Ans 1. 291

2. 575

3. 506

4. 433

QuestionID:26433066165

Option1ID:264330259195

Option2ID:264330259194

Option3ID:264330259193

Option4ID:264330259192

Status:Answered

ChosenOption: 4

Q.15 Simplify the given expression.

$$(1 + x)^3 + (1 - x)^3 + (-2)^3$$

- Ans
- 1. $6(1-x^2)$
 - 2. $-3(1-x^2)$
 - 3. $-6(1-x^2)$
 - 4. $3(1-x^2)$

QuestionID:264330157763

Option1ID:264330618411

Option2ID:264330618414

Option3ID:264330618412

Option4ID:264330618413

Status:Answered

ChosenOption: 3

Q.16 If $1 \frac{1}{3} \div \frac{2}{5} \times \frac{x}{5} = 1 \frac{1}{4} \times \frac{2}{3} \div \frac{1}{6}$, then the value of x is:

- Ans
- 1. 5.5
 - 2. 7.5
 - 3. 7.0
 - 4. 15

QuestionID:26433063986

Option1ID:264330250538

Option2ID:264330250536

Option3ID:264330250539

Option4ID:264330250537

Status:Answered

ChosenOption: 2

Q.17 The average weight of 49 students is 53 kg. When a new student is admitted to the class, the average decreases by 500 g. Find the weight of the new student.

- Ans
- 1. 48 kg
 - 2. 18 kg
 - 3. 28 kg
 - 4. 38 kg

QuestionID:264330104284

Option1ID:264330409440

Option2ID:264330409437

Option3ID:264330409438

Option4ID:264330409439

Status:Answered

ChosenOption: 3

Q.18 In an election between two candidates, the difference between the candidates who won and lost was 2,500 votes. The candidate who won got 75% of the votes, and there were no invalid votes. The total number of votes polled of the losing candidate was:

- Ans
- 1. 1875
 - 2. 5000
 - 3. 1250
 - 4. 3750

QuestionID:264330145061
Option1ID:264330568500
Option2ID:264330568502
Option3ID:264330568499
Option4ID:264330568501
Status:Answered
ChosenOption: 3

Q.19 In an election between two candidates, 30% of the electorate did not cast their votes. 20% of the votes polled were found invalid. The winning candidate got 64% of the valid votes and won by a majority of 3136 votes. Find the number of voters enrolled in the voter list.

- Ans
- 1. 20000
 - 2. 25000
 - 3. 24000
 - 4. 30000

QuestionID:264330103392
Option1ID:264330405873
Option2ID:264330405874
Option3ID:264330405875
Option4ID:264330405876
Status:Answered
ChosenOption: 1

Q.20 Find the mean proportion of x^3y and xy^3 . Ans

- 1. x^2y^2
- 2. x^3y^3
- 3. xy
- 4. x^4y^4

QuestionID:264330145074
Option1ID:264330568552
Option2ID:264330568553
Option3ID:264330568551
Option4ID:264330568554
Status:Answered
ChosenOption: 1

Q.21 The least common multiple of 12, 18 and 27 is: Ans

- 1. 54
- 2. 216
- 3. 27
- 4. 108

QuestionID:26433066158
Option1ID:264330259164
Option2ID:264330259167
Option3ID:264330259165
Option4ID:264330259166
Status:Answered
ChosenOption: 4

Q.22 Jimmy has to cover a distance of 88 km in 16 hours. If she covers half of the journey in $\frac{3}{4}$ time, then what should be her speed to cover the remaining distance in the time left?

- Ans
- 1. 12 km/h
 - 2. 10 km/h
 - 3. 11 km/h
 - 4. 13 km/h

QuestionID:26433082849
Option1ID:264330325231
Option2ID:264330325230
Option3ID:264330325229
Option4ID:264330325232
Status:Answered
ChosenOption: 3

Q.23 What is the smallest perfect square number which is completely divisible by 4, 6, 9, 12 and 15?

- Ans
- 1. 784
 - 2. 900
 - 3. 961
 - 4. 841

QuestionID:26433073067
Option1ID:264330286463
Option2ID:264330286461
Option3ID:264330286462
Option4ID:264330286460
Status:Answered
ChosenOption: 2

Q.24 A vehicle is going at one-fourth of its usual speed and it takes an extra 45 minutes to reach its destination. Its usual time to cover the same distance is:

- Ans 1. 15 minutes
 2. 10 minutes
 3. 30 minutes
 4. 20 minutes

QuestionID:264330103740
Option1ID:264330407266
Option2ID:264330407265
Option3ID:264330407268
Option4ID:264330407267
Status:Answered
ChosenOption: 1

Q.25 Kanchan lent ₹10,000 for 2 years and ₹5,000 for 4 years at the same rate of simple interest. If the total interest received by Kanchan is ₹2,000, then what was the rate of interest?

- Ans 1. 5%
 2. 2%
 3. 3%
 4. 4%

QuestionID:264330165672
Option1ID:264330649770
Option2ID:264330649767
Option3ID:264330649768
Option4ID:264330649769
Status:Answered
ChosenOption: 1

Q.26 The average weight of A, B and C is 77 kg. If the average weight of A and B is 68 kg and that of B and C is 83 kg, then the weight (in kg) of B is:

- Ans 1. 74
 2. 71
 3. 73
 4. 67

QuestionID:264330170130
Option1ID:264330667198
Option2ID:264330667197
Option3ID:264330667196
Option4ID:264330667195
Status:Answered
ChosenOption: 2

Q.27 The diameter of a hemisphere is equal to the diagonal of a rectangle of length 4 cm and breadth 3 cm. Find the total surface area (in cm^2) of the hemisphere.

- Ans
- 1. 25π
 - 2. $\frac{75\pi}{4}$
 - 3. $\frac{50\pi}{4}$
 - 4. $\frac{25\pi}{4}$

QuestionID:264330145108

Option1ID:264330568690

Option2ID:264330568688

Option3ID:264330568689

Option4ID:264330568687

Status:Answered

ChosenOption: 2

Q.28 A cylindrical metal rod of diameter 2 cm and length 45 cm is melted and converted into wire of uniform thickness and length 5 m. The diameter of the wire is:

- Ans
- 1. 3 mm
 - 2. 2 mm
 - 3. 6 mm
 - 4. 5 mm

QuestionID:264330123006

Option1ID:264330482087

Option2ID:264330482090

Option3ID:264330482089

Option4ID:264330482088

Status:Answered

ChosenOption: 1

Q.29 If the base radius and the height of a right circular cone are increased by 10%, then the percentage increase in the volume is:

- Ans
- 1. 30.2%
 - 2. 22.1%
 - 3. 33.1%
 - 4. 20.2%

QuestionID:264330103640

Option1ID:264330406867

Option2ID:264330406866

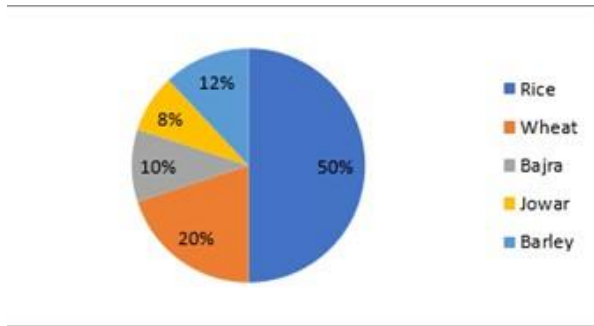
Option3ID:264330406868

Option4ID:264330406865

Status:Answered

ChosenOption: 3

Q.30 The given pie chart shows the distribution of land under various food crops. The expenditure invested on these food crops is ₹25,000 per annum. Study the pie chart carefully and answer the question that follows.



The expenditure invested in Rice and Barley is what percentage (correct to 2 decimal places) of the expenditure invested in Wheat and Bajra?

- Ans
- 1. 206.55%
 - 2. 206.66%
 - 3. 260.66%
 - 4. 260.55%

QuestionID:264330165410
 Option1ID:264330648720
 Option2ID:264330648722
 Option3ID:264330648721
 Option4ID:264330648719
 Status:Answered
 ChosenOption: 2

Q.31 If perimeter of the circle is 13.2 cm, then the radius of the circle is _____.

(Take $\pi = \frac{22}{7}$)

- Ans
- 1. 6.6 cm
 - 2. 4.2 cm
 - 3. 2.1 cm
 - 4. 3.3 cm

QuestionID:264330165443
 Option1ID:264330648853
 Option2ID:264330648851
 Option3ID:264330648852
 Option4ID:264330648854
 Status:Answered
 ChosenOption: 3

Q.32 A good train 350 m long passes through a tunnel of 1250 m in 80 seconds. What is the speed of the train?

- Ans
- 1. 72 km/h
 - 2. 64 km/h
 - 3. 78 km/h
 - 4. 56 km/h

QuestionID:264330145068
 Option1ID:264330568528
 Option2ID:264330568529
 Option3ID:264330568530
 Option4ID:264330568527
 Status:Answered
 ChosenOption: 1

Q.33 Study the given table and answer the question that follows.

The table shows the number of employees in five different organisations A, B, C, D and E in different departments.

Dept ↓ Org →	A	B	C	D	E
HR	1050	1015	976	888	1004
Finance	1017	960	786	1025	963
Marketing	1382	1384	1275	1300	1290
Production	1542	1545	4550	1570	1580
Accounts	786	745	801	800	735
Legal	48	54	36	30	53
Total	5825	5703	5424	5613	5625

Which department has a minimum number of employees in each organisation?

- Ans
- 1. Marketing
 - 2. Production
 - 3. Accounts
 - 4. Legal

QuestionID:264330157722
 Option1ID:264330618247
 Option2ID:264330618248
 Option3ID:264330618249
 Option4ID:264330618250
 Status:Answered
 ChosenOption: 4

Q.34

The value of $\frac{a^2 - (b - c)^2}{(a + c)^2 - b^2} + \frac{b^2 - (a - c)^2}{(a + b)^2 - c^2} + \frac{c^2 - (a - b)^2}{(b + c)^2 - a^2}$ is:

- Ans
- 1. 1
 - 2. 2
 - 3. -1
 - 4. 3

QuestionID:264330157772
 Option1ID:264330618448
 Option2ID:264330618449
 Option3ID:264330618447
 Option4ID:264330618450
 Status:NotAnswered
 ChosenOption:--

Q.35 In a triangle LMN, OP is a line segment drawn parallel to the side MN. OP intersects the sides LM and LN at O and P, respectively. If LM = 15 cm, OM = 4 cm, and PN = 5 cm, then what is the length (in cm) of the side LN?

- Ans
- 1. 16.25
 - 2. 18.75
 - 3. 20.25
 - 4. 22.75

QuestionID:264330165690
 Option1ID:264330649839
 Option2ID:264330649840
 Option3ID:264330649841
 Option4ID:264330649842
 Status:Answered
 ChosenOption: 2

Q.36

The value of $\sqrt{\frac{1 + \sin A}{1 - \sin A}}$ is:

- Ans
- 1. $\sec A - \tan A$
 - 2. $\operatorname{cosec} A + \cot A$
 - 3. $\sec A + \tan A$
 - 4. $\operatorname{cosec} A - \cot A$

QuestionID:264330157754

Option1ID:264330618376

Option2ID:264330618377

Option3ID:264330618375

Option4ID:264330618378

Status:Answered

ChosenOption: 3

Q.37 Determine the LCM of two numbers if their HCF is 12 and their ratio is 13:15. Ans

- 1. 1780
- 2. 2450
- 3. 1890
- 4. 2340

QuestionID:26433071295

Option1ID:264330279604

Option2ID:264330279607

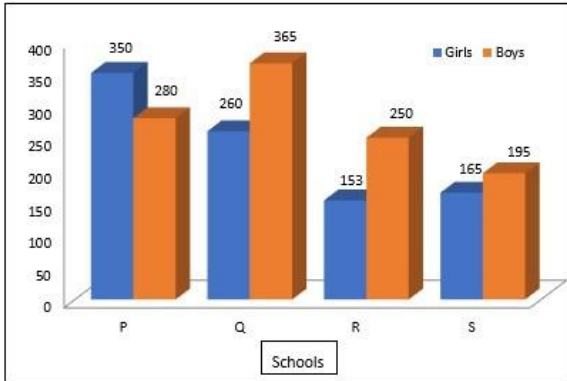
Option3ID:264330279606

Option4ID:264330279605

Status:Answered

ChosenOption: 4

Q.38 Study the given graph and answer the question that follows.
The graph shows data regarding number of boys and girls studying in class 5 in four different schools.



What is the difference between total number of boys studying in school P and Q together and the total number of girls in the same schools together?

- Ans**
- 1. 38
 - 2. 45
 - 3. 40
 - 4. 35

QuestionID:264330158275

Option1ID:264330620460

Option2ID:264330620462

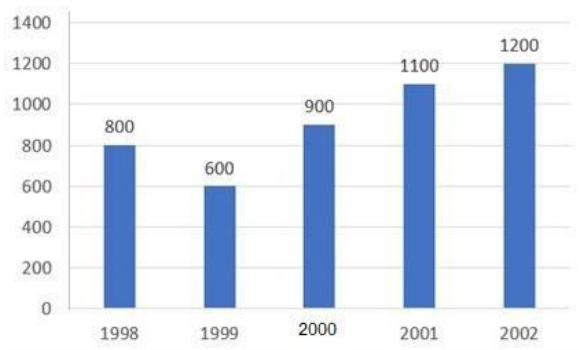
Option3ID:264330620461

Option4ID:264330620459

Status:Answered

ChosenOption: 4

Q.39 Study the given bar-graph and answer the question that follows.
The bar-graph displays the number of bicycles produced at a factory from 1998 to 2002.



What was the average number of bicycles produced at the factory per year from 1998-2002?

- Ans**
- 1. 940
 - 2. 960
 - 3. 920
 - 4. 880

QuestionID:264330157734

Option1ID:264330618296

Option2ID:264330618295

Option3ID:264330618297

Option4ID:264330618298

Status:Answered

ChosenOption: 3

Q.40 Find the least number which when divided by 4, 9, 12 and 15, leaves the remainder 3 in each case.

- Ans 1. 360
 2. 183
 3. 193
 4. 180

QuestionID:26433063994

Option1ID:264330250569

Option2ID:264330250570

Option3ID:264330250568

Option4ID:264330250571

Status:Answered

ChosenOption: 2

Q.41 The table below shows the number of trees planted by the government in 4 different years.

Year	Neem	Oak	Birch
2019	2000	3000	4000
2020	3000	4000	5000
2021	5000	6000	7000
2022	7000	8000	9000

Find the ratio between the number of neem trees planted in the year 2021 and the number of birch trees planted in the year 2022.

- Ans 1. 5:9
 2. 3:7
 3. 5:8
 4. 3:8

QuestionID:264330158385

Option1ID:264330620902

Option2ID:264330620901

Option3ID:264330620899

Option4ID:264330620900

Status:Answered

ChosenOption: 1

Q.42 On an item, there is an 18% discount on the marked price of ₹26,000. After giving an additional season's discount, the item is sold at ₹16,000. How much was the season's discount correct up to two places of decimal?

- Ans 1. 22.45%
 2. 24.95%
 3. 24.65%
 4. 35.25%

QuestionID:264330104407

Option1ID:264330409929

Option2ID:264330409931

Option3ID:264330409930

Option4ID:264330409932

Status:Answered

ChosenOption: 2

Q.43 In ΔPQR , $\angle P=90^\circ$, $\angle R=47^\circ$ and $PS \perp QR$. Find the value of $\angle QPS$.

Ans 1. 43°

2. 47°

3. 45°

4. 40°

QuestionID:264330158285

Option1ID:264330620500

Option2ID:264330620502

Option3ID:264330620501

Option4ID:264330620499

Status:Answered

ChosenOption: 1

Q.44 Sanjay and Rohan can complete a work in 8 days and 12 days, respectively. Starting with Sanjay, they work on alternate days. In how many days will the work be completed?

Ans 1. $8\frac{1}{2}$

2. $9\frac{1}{2}$

3. $9\frac{2}{3}$

4. $9\frac{1}{3}$

QuestionID:26433087393

Option1ID:264330343212

Option2ID:264330343209

Option3ID:264330343211

Option4ID:264330343210

Status:Answered

ChosenOption: 2

Q.45 Study the given table and answer the question that follows.

The table shows the percentage population of four states below poverty line and proportion of male to female.

State	Percentage of population below poverty line	Proportion of male to female	
		Below poverty line	Above poverty line
		Male : Female	Male : Female
P	28	3 : 2	7 : 3
Q	15	4 : 7	6 : 5
R	24	5 : 3	3 : 3
S	13	2 : 5	1 : 3

If the total population of state R is 26,000, then what is the number of females above poverty line in state R?

- Ans 1. 9,780
 2. 9,880
 3. 9,560
 4. 9,950

QuestionID:264330158261
Option1ID:264330620404
Option2ID:264330620405
Option3ID:264330620403
Option4ID:264330620406

Status: Answered

ChosenOption: 2

Q.46 A is a chord of a circle having radius 1.7 cm. If the distance of this chord AB from the centre of the circle is 0.8 cm, then what is the length (in cm) of the chord AB?

- Ans 1. 4
 2. 1
 3. 3
 4. 2

QuestionID:264330165692
Option1ID:264330649850
Option2ID:264330649847
Option3ID:264330649849
Option4ID:264330649848

Status: Answered

ChosenOption: 3

Q.47 The monthly budget of an average household is given in the following table.

Category	Food	Clothing	Rent	Savings
Amount	8000	2000	6000	4000

The percentage of the monthly budget spent on clothing is:

- Ans 1. 10%
 2. 2.12%
 3. 3.8%
 4. 4.4%

QuestionID:264330167239
Option1ID:264330655952
Option2ID:264330655954
Option3ID:264330655953
Option4ID:264330655951
Status:Answered
ChosenOption: 1

Q.48 If the HCF of 45 and 55 is expressible in the form of $55x + 45m$, then what is the value of m ?

- Ans 1. -6
 2. 5
 3. 6
 4. -5

QuestionID:26433074253
Option1ID:264330291134
Option2ID:264330291133
Option3ID:264330291135
Option4ID:264330291132
Status:NotAnswered
ChosenOption:--

Q.49 The monthly salary of a person is ₹50,000. He spends 40% of his salary on household expenses, 25% on rent, and 15% on transportation, and saves the remaining amount. What is his yearly savings?

- Ans 1. ₹1,00,000
 2. ₹1,10,000
 3. ₹1,20,000
 4. ₹90,000

QuestionID:264330157713
Option1ID:264330618212
Option2ID:264330618213
Option3ID:264330618214
Option4ID:264330618211
Status:Answered
ChosenOption: 3

Q.50 The cost price of pulses is 12% less than the selling price. Using a faulty weighing machine, shopkeeper is able to earn 25% profit. How much per cent of the faulty machines shows more weight as compared to the actual weight (Rounded off to the nearest integer)?

- Ans
- 1. 13%
 - 2. 15%
 - 3. 10%
 - 4. 14%

QuestionID:264330102068
Option1ID:264330400779
Option2ID:264330400780
Option3ID:264330400777
Option4ID:264330400778
Status:Answered
ChosenOption: 3

Section:EnglishComprehension

Select the option that can be used as a one-word substitute for the given group of words.
A collection of historical documents or records providing information about a place, institution, or group of people

- Ans
- 1. Museum
 - 2. Apostate
 - 3. Asylum
 - 4. Archive

QuestionID:264330164298
Option1ID:264330644410
Option2ID:264330644409
Option3ID:264330644408
Option4ID:264330644407
Status:Answered
ChosenOption: 1

Select the most appropriate idiom for the given situation focusing on the underlined segment.

The modern nerastatistics dataprovides useful advantage to the players at competent level.

- Ans
- 1. Costanarmandaleg
 - 2. Gristtothemill
 - 3. Putsomethingonice
 - 4. Playitby ear

QuestionID:264330163409
Option1ID:264330640917
Option2ID:264330640915
Option3ID:264330640916
Option4ID:264330640918
Status:Answered
ChosenOption: 2

The following sentence has been divided into parts. One of them may contain an error. Select the part that contains the error from the given options. If you don't find any error, mark 'No error' as your answer.

We should/not make a noise/in the class.

- Ans
- 1. in the class
 - 2. We should
 - 3. No error
 - 4. not make a noise

QuestionID:264330117174

Option1ID:264330460763

Option2ID:264330460761

Option3ID:264330460764

Option4ID:264330460762

Status:Answered

ChosenOption: 4

Q.4 Identify the ANTONYM of the following word in the given sentence. Languid
The animated infantry was marching forward for another rehearsal.

- Ans
- 1. infantry
 - 2. rehearsal
 - 3. forward
 - 4. animated

QuestionID:264330167910

Option1ID:264330658561

Option2ID:264330658562

Option3ID:264330658560

Option4ID:264330658559

Status:Answered

ChosenOption: 4

Q.5 Select the most appropriate meaning of the given idiom. Steer clear of

- Ans
- 1. Loosely temper and react furiously to someone
 - 2. Avoid someone or something because it is dangerous for you
 - 3. Show someone how to do a job or activity
 - 4. Be kind and empathetic to someone

QuestionID:264330135998

Option1ID:264330532833

Option2ID:264330532832

Option3ID:264330532831

Option4ID:264330532834

Status:Answered

ChosenOption: 2

Q.6 Select the most appropriate ANTONYM for the highlighted word. The malice he developed for all caused a lot of damage.

- Ans
- 1. avarice
 - 2. grace
 - 3. oppression
 - 4. sympathy

QuestionID:264330120741
Option1ID:264330473179
Option2ID:264330473181
Option3ID:264330473182
Option4ID:264330473180
Status:Answered
ChosenOption: 4

Q.7 The following sentence has been divided into parts. One of them may contain an error. Select the part that contains the error from the given options. If you don't find any error, mark 'No error' as your answer.

I was wish/to me ether/on her birthday.

- Ans
- 1. I was wish
 - 2. No error
 - 3. to me ether
 - 4. on her birthday

QuestionID:26433073521
Option1ID:264330288232
Option2ID:264330288235
Option3ID:264330288233
Option4ID:264330288234
Status:Answered
ChosenOption: 1

Q.8 The following sentence has been split into four segments. Identify the segment that contains a grammatical error.

It is take/a couple of minutes/for the computer/to boot up.

- Ans
- 1. for the computer
 - 2. to boot up
 - 3. a couple of minutes
 - 4. It is take

QuestionID:264330145277
Option1ID:264330569365
Option2ID:264330569366
Option3ID:264330569364
Option4ID:264330569363
Status:Answered
ChosenOption: 4

Q.9 You are preparing a speech for an upcoming function. Select a synonym for the highlighted word to make it better.

Sexual assault is a severe and pervasive issue that can have a significant impact on a victim's life.

- Ans
- 1. Retrospective
 - 2. Longitudinal
 - 3. Widespread
 - 4. Equatorial

QuestionID:264330121905
Option1ID:264330477776
Option2ID:264330477777
Option3ID:264330477775
Option4ID:264330477778
Status:Answered
ChosenOption: 3

Q.10 Select the INCORRECTLY spelt word. Ans

- 1. Adjourn
- 2. Addict
- 3. Abdact
- 4. Advise

QuestionID:26433089398
Option1ID:264330351095
Option2ID:264330351094
Option3ID:264330351093
Option4ID:264330351096
Status:Answered
ChosenOption: 3

Q.11 Choose the option which means the same as the underlined segment.
The boss wanted to finish the case before the arrival of the inspection team.

- Ans
- 1. be over and done with
 - 2. be over one's head
 - 3. be over and over
 - 4. be over a barrel

QuestionID:264330120535
Option1ID:264330472389
Option2ID:264330472388
Option3ID:264330472387
Option4ID:264330472390
Status:Answered
ChosenOption: 1

Q.12 Select the most appropriate synonym of the given word.

Cruise

- Ans
- 1. Bounce
 - 2. Fall
 - 3. Distance
 - 4. Voyage

QuestionID:264330163369

Option1ID:264330640764

Option2ID:264330640765

Option3ID:264330640763

Option4ID:264330640766

Status:Not Answered

ChosenOption:--

Q.13 Select the most appropriate meaning of the highlighted idiom in the given sentence.

Nancy held a grudge against her teacher for a long time, but she finally decided to let **be by gones**.

- Ans
- 1. Change the past
 - 2. Take revenge
 - 3. Flatter someone
 - 4. Ignore the past

QuestionID:264330108899

Option1ID:264330427875

Option2ID:264330427873

Option3ID:264330427876

Option4ID:264330427874

Status:Answered

ChosenOption: 4

Q.14 Select the option that will improve the underlined part of the given sentence.
Farmers have harvested wheat by using whatever labour that was available to them.

- Ans
- 1. by using amalgamated labour
 - 2. by using limited labour
 - 3. by using dispersed labour
 - 4. by using united labour

QuestionID:264330145291

Option1ID:264330569420

Option2ID:264330569421

Option3ID:264330569422

Option4ID:264330569419

Status:Answered

ChosenOption: 2

Q.15 Select the most appropriate meaning of the underlined idiom in the following sentence.

Rahim had to eat a humble pie in starting a row with his neighbour over a rifle.

- Ans
- 1. To remain without food
 - 2. To be punished for doing something wrong
 - 3. To take simple food
 - 4. To feel sorry and apologise for a mistake

QuestionID:264330157063
Option1ID:264330615625
Option2ID:264330615626
Option3ID:264330615624
Option4ID:264330615623
Status:Answered
ChosenOption: 4

Q.16 Select the most appropriate option that can substitute the underlined segment in the given sentence.

Malati has a difficult job, but she does it good.

- Ans
- 1. better
 - 2. well
 - 3. best
 - 4. nice

QuestionID:264330120553
Option1ID:264330472457
Option2ID:264330472456
Option3ID:264330472458
Option4ID:264330472455
Status:Answered
ChosenOption: 2

Q.17 Select the most appropriate synonym of the given word. Fierce

- Ans
- 1. Lame
 - 2. Lavish
 - 3. Strange
 - 4. Furious

QuestionID:264330117153
Option1ID:264330460677
Option2ID:264330460680
Option3ID:264330460679
Option4ID:264330460678
Status:Answered
ChosenOption: 4

Q.18 Select the most appropriate synonym of the given word. Faithful

- Ans
- 1. Daring
 - 2. Unfaithful
 - 3. Cheerful
 - 4. Loyal

QuestionID:264330164163
Option1ID:264330643903
Option2ID:264330643904
Option3ID:264330643906
Option4ID:264330643905

Status:MarkedForReview
ChosenOption: 4

Q.19 Select the most appropriate meaning of the underlined idiom. Yamini is a great singer. She will make it big one day.

- Ans
- 1. Succeed and become famous
 - 2. Become financially sound
 - 3. Educated and rich
 - 4. Migrate and settle

QuestionID:264330132897
Option1ID:264330520649
Option2ID:264330520648
Option3ID:264330520647
Option4ID:264330520650

Status:Answered
ChosenOption: 1

Q.20 Select the most appropriate ANTONYM of the given word. Malice

- Ans
- 1. Torsion
 - 2. Haughtiness
 - 3. Kindness
 - 4. Tremor

QuestionID:26433097019
Option1ID:264330380812
Option2ID:264330380809
Option3ID:264330380810
Option4ID:264330380811

Status:Answered
ChosenOption: 3

Q.21 Select the most appropriate option that can substitute the underlined segment in the given sentence. If there is no need to substitute it, select 'No substitution required'. He travelled the whole world, but found piece at home.

- Ans
- 1. peach
 - 2. No substitution required
 - 3. prize
 - 4. peace

QuestionID:26433070773
Option1ID:264330277550
Option2ID:264330277551
Option3ID:264330277548
Option4ID:264330277549
Status:Answered
ChosenOption: 4

Q.22 Select the most appropriate meaning of the given word.

Trousseau

- Ans
- 1. Being true to oneself
 - 2. The clothes, linen, and other belongings collected by a bride for her marriage
 - 3. A large cabinet full of expensive clothes
 - 4. Single leg side of a trouser

QuestionID:26433073743
Option1ID:264330289112
Option2ID:264330289114
Option3ID:264330289115
Option4ID:264330289113
Status:Answered
ChosenOption: 2

Q.23 Select the option that can be used as a one-word substitute for the underlined group of words.

Since God is an all-powerful creator, he has absolute control over those whom he has created.

- Ans
- 1. Voracious
 - 2. Omnipotent
 - 3. Incurable
 - 4. Omniscient

QuestionID:26433088835
Option1ID:264330348895
Option2ID:264330348893
Option3ID:264330348894
Option4ID:264330348896
Status:Answered
ChosenOption: 2

Q.24 Select the most appropriate option to substitute the underlined segment in the given sentence.

At some point in the past, there were rows of temporary shops that used to display various cooking utensils.

- Ans
- 1. One upon a time
 - 2. Before now
 - 3. In the past few years
 - 4. Long ago

QuestionID:26433070646
Option1ID:264330277046
Option2ID:264330277044
Option3ID:264330277045
Option4ID:264330277047
Status:Answered
ChosenOption: 1

Q.25 Select the option that can be used as a one-word substitute for the given group of words.

A structure in the garden where climbing plants can grow and people can walk under Ans

- 1. Tomb
- 2. Outhouse
- 3. Pergola
- 4. Treehouse

QuestionID:26433088896
Option1ID:264330349132
Option2ID:264330349130
Option3ID:264330349129
Option4ID:264330349131
Status:Answered
ChosenOption: 3

Q.26 Select the most appropriate option that can substitute the underlined segment in the given sentence.

She was yearning for a trip to the mountains.

- Ans
- 1. leaving for
 - 2. deeply repenting
 - 3. keenly desiring
 - 4. saving money for

QuestionID:26433099881
Option1ID:264330392113
Option2ID:264330392115
Option3ID:264330392114
Option4ID:264330392116
Status:Answered
ChosenOption: 4

Q.27 Select the most appropriate idiom for the given situation.

You wanted to speak but you controlled yourself and became patient. What have you done?

- Ans
- 1. Pin drop silence
 - 2. Dragged your feet
 - 3. Herculean task
 - 4. Held your horses

QuestionID:264330100296

Option1ID:264330393749

Option2ID:264330393752

Option3ID:264330393751

Option4ID:264330393750

Status:Answered

ChosenOption: 4

Q.28 Select the most appropriate meaning of the given idiom.

Step up to the plate

- Ans
- 1. Think about a crisis
 - 2. Plan for better performance
 - 3. Implement a plan
 - 4. Take control of a situation

QuestionID:26433099939

Option1ID:264330392331

Option2ID:264330392330

Option3ID:264330392329

Option4ID:264330392332

Status:Not Answered

ChosenOption:--

Q.29 Select the most appropriate meaning of the underlined idiom.
Heat the whole bunch of grapes under the nose of all of us.

- Ans
- 1. After much persuasion
 - 2. In full view of somebody
 - 3. Sharing equally
 - 4. Secretly

QuestionID:264330122978

Option1ID:264330481978

Option2ID:264330481977

Option3ID:264330481976

Option4ID:264330481975

Status:Answered

ChosenOption: 2

Q.30 Select the INCORRECTLY spelt word. Ans

- 1. Preferred
- 2. Reversed
- 3. Answered
- 4. Reference

QuestionID:264330163412
Option1ID:264330640928
Option2ID:264330640929
Option3ID:264330640930
Option4ID:264330640927
Status:Answered
ChosenOption: 1

Q.31 Select the option that can be used as a one-word substitute for the given group of words.

Extremely beautiful, elaborate or impressive

- Ans
- 1. Proficient
 - 2. Magnificent
 - 3. Transient
 - 4. Deficient

QuestionID:26433089338
Option1ID:264330350854
Option2ID:264330350855
Option3ID:264330350856
Option4ID:264330350853
Status:Answered
ChosenOption: 2

Q.32 Select the most appropriate meaning of the given idiom. To burn the midnight oil

- Ans
- 1. To waste time
 - 2. To stay up late working or studying
 - 3. To overthink
 - 4. To be relaxed and calm

QuestionID:264330139773
Option1ID:264330547509
Option2ID:264330547508
Option3ID:264330547510
Option4ID:264330547507
Status:Answered
ChosenOption: 2

Q.33 Select the most appropriate synonym of the underlined word.

It was inevitable that the team management would sack him after his rude behaviour.

- Ans
- 1. impassionate
 - 2. amiable
 - 3. measurable
 - 4. unavoidable

QuestionID:264330120616

Option1ID:264330472706

Option2ID:264330472703

Option3ID:264330472704

Option4ID:264330472705

Status:Answered

ChosenOption: 4

Q.34 Select the INCORRECTLY spelt word from the underlined words in the following sentence.

As affidevit is a statement or declaration in writing or an oath or affirmation, sworn before a person having authority to administer oath.

- Ans
- 1. affidevit
 - 2. administer
 - 3. authority
 - 4. affirmation

QuestionID:264330141155

Option1ID:264330552963

Option2ID:264330552966

Option3ID:264330552965

Option4ID:264330552964

Status:Answered

ChosenOption: 1

Q.35 The following sentence has been split into four segments. Identify the segment that contains a grammatical error.

We have being/arranged the stay/for the guests sat/a hillside resort.

- Ans
- 1. a hillside resort
 - 2. We have being
 - 3. arranged the stay
 - 4. for the guests sat

QuestionID:26433091957

Option1ID:264330361168

Option2ID:264330361165

Option3ID:264330361166

Option4ID:264330361167

Status:Answered

ChosenOption: 2

Q.36 Select the most appropriate synonym of the given word.

Extravagance

- Ans
- 1. Simplicity
 - 2. Love
 - 3. Fortune
 - 4. Self-indulgence

QuestionID:264330163371
Option1ID:264330640773
Option2ID:264330640774
Option3ID:264330640772
Option4ID:264330640771
Status:Answered
ChosenOption: 4

Q.37 Select the most appropriate synonym of the given word.

Antique

- Ans
- 1. Ancient
 - 2. New
 - 3. Gothic
 - 4. Modern

QuestionID:264330163355
Option1ID:264330640713
Option2ID:264330640714
Option3ID:264330640712
Option4ID:264330640711
Status:NotAnswered
ChosenOption:--

Q.38 Select the INCORRECTLY spelt word in the given sentence.

The Egyptian Pharaohs were the Kings of ancient Egypt and were considered as the literal embodiment of God himself.

- Ans
- 1. literal
 - 2. ancient
 - 3. pharohs
 - 4. embodiment

QuestionID:26433089738
Option1ID:264330352446
Option2ID:264330352448
Option3ID:264330352447
Option4ID:264330352445
Status:Answered
ChosenOption: 4

Q.39 Select the INCORRECTLY spelt word. Ans

- 1. Isle
- 2. Braed
- 3. Achieve
- 4. Amicable

QuestionID:264330163410
Option1ID:264330640921
Option2ID:264330640922
Option3ID:264330640920
Option4ID:264330640919
Status:Answered
ChosenOption: 2

Q.40 Select the most appropriate option that can substitute the underlined segment in the given sentence.

Nain is leaving and I am think to apply for her job.

- Ans
- 1. thinking in applying
 - 2. thinking about applying
 - 3. thinking about apply
 - 4. thinking on applying

QuestionID:264330108915
Option1ID:264330427938
Option2ID:264330427940
Option3ID:264330427937
Option4ID:264330427939
Status:Answered
ChosenOption: 2

Comprehension:

In the following passage, some words have been deleted. Read the passage carefully and select the most appropriate option to fill in each blank.

Discrimination refers to the inequitable or (1) _____ treatment of individuals or collectives on the basis of attributes such as ethnicity, sex, age and sexual orientation. Studies have indicated that the perception of discrimination can (2) _____ a series of stress-induced alterations in an individual's mental, physiological and behavioural responses. The experience of stress is known to elicit unfavourable emotional reactions, including but not limited to (3) _____, despair and resentment. Furthermore, anxiety has been linked to a rise in health-compromising behaviours such as smoking, drinking and (4) _____ drug use, while simultaneously causing a (5) _____ in health-promoting activities such as quality sleep and vigorous exercise.

SubQuestionNo:41

Q.41 Select the most appropriate option to fill in blank no. 1. Ans

- 1. systematic
- 2. biased
- 3. pathetic
- 4. tragic

QuestionID:264330163437
Option1ID:264330641021
Option2ID:264330641020
Option3ID:264330641019
Option4ID:264330641022
Status:Answered
ChosenOption: 3

Comprehension:

In the following passage, some words have been deleted. Read the passage carefully and select the most appropriate option to fill in each blank.

Discrimination refers to the inequitable or (1) _____ treatment of individuals or collectives on the basis of attributes such as ethnicity, sex, age and sexual orientation. Studies have indicated that the perception of discrimination can (2) _____ a series of stress-induced alterations in an individual's mental, physiological and behavioural responses. The experience of stress is known to elicit unfavourable emotional reactions, including but not limited to (3) _____, despair and resentment. Furthermore, anxiety has been linked to a rise in health-compromising behaviours such as smoking, drinking and (4) _____ drug use, while simultaneously causing a (5) _____ in health-promoting activities such as quality sleep and vigorous exercise.

SubQuestionNo:42

Q.42 Select the most appropriate option to fill in blank no.2. Ans

- 1. support
- 2. inspire
- 3. trigger
- 4. motivate

QuestionID:264330163438

Option1ID:264330641026

Option2ID:264330641025

Option3ID:264330641023

Option4ID:264330641024

Status:Answered

ChosenOption: 3

Comprehension:

In the following passage, some words have been deleted. Read the passage carefully and select the most appropriate option to fill in each blank.

Discrimination refers to the inequitable or (1) _____ treatment of individuals or collectives on the basis of attributes such as ethnicity, sex, age and sexual orientation. Studies have indicated that the perception of discrimination can (2) _____ a series of stress-induced alterations in an individual's mental, physiological and behavioural responses. The experience of stress is known to elicit unfavourable emotional reactions, including but not limited to (3) _____, despair and resentment. Furthermore, anxiety has been linked to a rise in health-compromising behaviours such as smoking, drinking and (4) _____ drug use, while simultaneously causing a (5) _____ in health-promoting activities such as quality sleep and vigorous exercise.

SubQuestionNo:43

Q.43 Select the most appropriate option to fill in blank no.3. Ans

- 1. death
- 2. anxiety
- 3. deafness
- 4. impairment

QuestionID:264330163439

Option1ID:264330641029

Option2ID:264330641030

Option3ID:264330641027

Option4ID:264330641028

Status:Answered

ChosenOption: 2

Comprehension:

In the following passage, some words have been deleted. Read the passage carefully and select the most appropriate option to fill in each blank.

Discrimination refers to the inequitable or (1) _____ treatment of individuals or collectives on the basis of attributes such as ethnicity, sex, age and sexual orientation. Studies have indicated that the perception of discrimination can (2) _____ a series of stress-induced alterations in an individual's mental, physiological and behavioural responses. The experience of stress is known to elicit unfavourable emotional reactions, including but not limited to (3) _____, despair and resentment. Furthermore, anxiety has been linked to a rise in health-compromising behaviours such as smoking, drinking and (4) _____ drug use, while simultaneously causing a (5) _____ in health-promoting activities such as quality sleep and vigorous exercise.

SubQuestionNo:44

Q.44 Select the most appropriate option to fill in blank no. 4. Ans

- 1. prescribed
- 2. mandatory
- 3. illicit
- 4. legitimate

QuestionID:264330163440

Option1ID:264330641033

Option2ID:264330641034

Option3ID:264330641032

Option4ID:264330641031

Status:Answered

ChosenOption: 3

Comprehension:

In the following passage, some words have been deleted. Read the passage carefully and select the most appropriate option to fill in each blank.

Discrimination refers to the inequitable or (1) _____ treatment of individuals or collectives on the basis of attributes such as ethnicity, sex, age and sexual orientation. Studies have indicated that the perception of discrimination can (2) _____ a series of stress-induced alterations in an individual's mental, physiological and behavioural responses. The experience of stress is known to elicit unfavourable emotional reactions, including but not limited to (3) _____, despair and resentment. Furthermore, anxiety has been linked to a rise in health-compromising behaviours such as smoking, drinking and (4) _____ drug use, while simultaneously causing a (5) _____ in health-promoting activities such as quality sleep and vigorous exercise.

SubQuestionNo:45

Q.45 Select the most appropriate option to fill in blank no. 5. Ans

- 1. rise
- 2. unfruitful
- 3. decline
- 4. upheaval

QuestionID:264330163441

Option1ID:264330641035

Option2ID:264330641038

Option3ID:264330641036

Option4ID:264330641037

Status:Answered

ChosenOption: 3

Comprehension:

Read the given passage carefully and answer the questions that follow.

The world of social media is a strange and wondrous place. It's a world where you can connect with people from all over the globe, share your thoughts and opinions, and maybe even go viral if you're lucky. But let's be real, it's also a world filled with endless cat videos, oversharing, and drama.

One of the most interesting things about social media is the way it's changed the way we communicate. We've gone from long, thoughtful emails to quick, abbreviated messages with emojis and acronyms. And don't even get me started on the whole hashtag phenomenon. It's like we're all speaking a different language now.

But there are also some downsides to this constant connection. It's easy to get sucked into the world of social media and forget about the real world around us. We're so busy scrolling through our feeds that we forget to enjoy the little moments in life. And let's not forget about the pressure to present the perfect life online. It's like we're all in a competition to see who can be the most popular, the most successful, the most enviable.

Despite all of this, I have to admit, I'm still a fan of social media. It's a great way to stay connected with friends and family, and I've even made some new friends through various online communities. Plus, let's face it, sometimes you just need a good laugh at a ridiculous meme.

Sub Question No: 46

Q.46 What is the ANTONYM of the word 'perfect', as used in the passage? Ans

- 1. Troublesome
- 2. Limited
- 3. Unsatisfactory
- 4. Laughable

Question ID: 264330165131

Option 1 ID: 264330647636

Option 2 ID: 264330647635

Option 3 ID: 264330647637

Option 4 ID: 264330647638

Status: Answered

Chosen Option: 3

Comprehension:

Read the given passage carefully and answer the question that follow.

The world of social media is a strange and wondrous place. It's a world where you can connect with people from all over the globe, share your thoughts and opinions, and maybe even go viral if you're lucky. But let's be real, it's also a world filled with endless cat videos, oversharing, and drama.

One of the most interesting things about social media is the way it's changed the way we communicate. We've gone from long, thoughtful emails to quick, abbreviated messages with emojis and acronyms. And don't even get me started on the whole hashtag phenomenon. It's like we're all speaking a different language now.

But there are also some downsides to this constant connection. It's easy to get sucked into the world of social media and forget about the real world around us. We're so busy scrolling through our feeds that we forget to enjoy the little moments in life. And let's not forget about the pressure to present the perfect life online. It's like we're all in a competition to see who can be the most popular, the most successful, the most enviable.

Despite all of this, I have to admit, I'm still a fan of social media. It's a great way to stay connected with friends and family, and I've even made some new friends through various online communities. Plus, let's face it, sometimes you just need a good laugh at a ridiculous meme.

SubQuestionNo:47

Q.47 Which of the following is NOT mentioned as a way social media has changed the way we communicate?

Ans 1. Quick, abbreviated messages with emojis and acronyms.

2. Video conferencing for more meaningful conversations.

3. Connecting with people from all over the world.

4. The use of hashtags.

QuestionID:264330165130

Option1ID:264330647631

Option2ID:264330647633

Option3ID:264330647634

Option4ID:264330647632

Status:Answered

ChosenOption: 2

Comprehension:

Read the given passage carefully and answer the question that follow.

The world of social media is a strange and wondrous place. It's a world where you can connect with people from all over the globe, share your thoughts and opinions, and maybe even go viral if you're lucky. But let's be real, it's also a world filled with endless cat videos, oversharing, and drama.

One of the most interesting things about social media is the way it's changed the way we communicate. We've gone from long, thoughtful emails to quick, abbreviated messages with emojis and acronyms. And don't even get me started on the whole hashtag phenomenon. It's like we're all speaking a different language now.

But there are also some downsides to this constant connection. It's easy to get sucked into the world of social media and forget about the real world around us. We're so busy scrolling through our feeds that we forget to enjoy the little moments in life. And let's not forget about the pressure to present the perfect life online. It's like we're all in a competition to see who can be the most popular, the most successful, the most enviable.

Despite all of this, I have to admit, I'm still a fan of social media. It's a great way to stay connected with friends and family, and I've even made some new friends through various online communities. Plus, let's face it, sometimes you just need a good laugh at a ridiculous meme.

SubQuestionNo:48

Q.48 Which of the following would be the most appropriate title for this passage? Ans

- 1. The Joys and Sorrows of Social Media
- 2. The Benefits of Social Media
- 3. The Dark Side of Social Media
- 4. Mastering the Art of Social Media

QuestionID:264330165127

Option1ID:264330647622

Option2ID:264330647619

Option3ID:264330647620

Option4ID:264330647621

Status:Answered

ChosenOption: 1

Comprehension:

Read the given passage carefully and answer the question that follow.

The world of social media is a strange and wondrous place. It's a world where you can connect with people from all over the globe, share your thoughts and opinions, and maybe even go viral if you're lucky. But let's be real, it's also a world filled with endless cat videos, oversharing, and drama.

One of the most interesting things about social media is the way it's changed the way we communicate. We've gone from long, thoughtful emails to quick, abbreviated messages with emojis and acronyms. And don't even get me started on the whole hashtag phenomenon. It's like we're all speaking a different language now.

But there are also some downsides to this constant connection. It's easy to get sucked into the world of social media and forget about the real world around us. We're so busy scrolling through our feeds that we forget to enjoy the little moments in life. And let's not forget about the pressure to present the perfect life online. It's like we're all in a competition to see who can be the most popular, the most successful, the most enviable.

Despite all of this, I have to admit, I'm still a fan of social media. It's a great way to stay connected with friends and family, and I've even made some new friends through various online communities. Plus, let's face it, sometimes you just need a good laugh at a ridiculous meme.

SubQuestionNo:49

Q.49 What is one of the downsides of social media mentioned in the passage? Ans

- 1. It can help connect with people all over the globe.
- 2. It's a great way to stay connected with friends and family.
- 3. It encourages people to enjoy the little moments in life.
- 4. It can lead to pressure to present a perfect life online.

QuestionID:264330165128

Option1ID:264330647624

Option2ID:264330647623

Option3ID:264330647626

Option4ID:264330647625

Status:Answered

ChosenOption: 4

Comprehension:

Read the given passage carefully and answer the questions that follow.

The world of social media is a strange and wondrous place. It's a world where you can connect with people from all over the globe, share your thoughts and opinions, and maybe even go viral if you're lucky. But let's be real, it's also a world filled with endless cat videos, oversharing, and drama.

One of the most interesting things about social media is the way it's changed the way we communicate. We've gone from long, thoughtful emails to quick, abbreviated messages with emojis and acronyms. And don't even get me started on the whole hashtag phenomenon. It's like we're all speaking a different language now.

But there are also some downsides to this constant connection. It's easy to get sucked into the world of social media and forget about the real world around us. We're so busy scrolling through our feeds that we forget to enjoy the little moments in life. And let's not forget about the pressure to present the perfect life online. It's like we're all in a competition to see who can be the most popular, the most successful, the most enviable.

Despite all of this, I have to admit, I'm still a fan of social media. It's a great way to stay connected with friends and family, and I've even made some new friends through various online communities. Plus, let's face it, sometimes you just need a good laugh at a ridiculous meme.

Sub Question No: 50

Q.50 What is the theme of the passage?

- Ans
- 1. The dangers of spending too much time online.
 - 2. The importance of social media for businesses.
 - 3. The positive and negative effects of social media.
 - 4. The history of social media.

Question ID: 264330165129

Option 1 ID: 264330647629

Option 2 ID: 264330647628

Option 3 ID: 264330647627

Option 4 ID: 264330647630

Status: Answered

Chosen Option: 3