

SSC MTS 2023 Tier 1 Sept 11 Shift 1 Question Paper with Answers

Roll Number	
Candidate Name	
Exam Date	11/09/2023
Exam Time	9:00 AM - 11:00 AM
Subject	MTS Non Tech Havaladar CBIC and CBN Examination 2023

Section : Numerical and Mathematical Ability

Q.1 If the selling price of 16 bulbs is equal to the cost price of 24 bulbs, what is the profit percentage?

- Ans 1. 40%
2. 50%
3. 25%
4. 20%

Question ID : 264330161014

Option 1 ID : 264330631388

Option 2 ID : 264330631390

Option 3 ID : 264330631389

Option 4 ID : 264330631387

Status : Answered

Chosen Option : 2

Q.2 If the manufacturer gains 10%, the wholesale dealer gains 12% and the retailer gains 15%, then find the cost production of a table, the retail price of which is ₹1,771.

- Ans 1. ₹1,150
2. ₹1,050
3. ₹1,250
4. ₹1,350

Question ID : 264330155998

Option 1 ID : 264330611393

Option 2 ID : 264330611391

Option 3 ID : 264330611392

Option 4 ID : 264330611394

Status : Answered

Chosen Option : 3

Q.3 If the average of two numbers is 12 and the product of the same two numbers is 119, then the difference of those two numbers is:

- Ans**
- 1. 7
 - 2. 6
 - 3. 10
 - 4. 8

Question ID : **264330156508**
Option 1 ID : **264330613420**
Option 2 ID : **264330613422**
Option 3 ID : **264330613421**
Option 4 ID : **264330613419**
Status : **Answered**
Chosen Option : **3**

Q.4 Two cyclists start at the same time from opposite ends of a 200 km long straight road. One cyclist travels at a speed of 20 km/h and the other at a speed of 30 km/h. How long will it take them to meet?

- Ans**
- 1. 5 hours
 - 2. 4 hours
 - 3. 5.5 hours
 - 4. 4.5 hours

Question ID : **264330156274**
Option 1 ID : **264330612497**
Option 2 ID : **264330612495**
Option 3 ID : **264330612498**
Option 4 ID : **264330612496**
Status : **Answered**
Chosen Option : **2**

Q.5 A hollow metal sphere of internal and external radii 5 cm and 6 cm, respectively, is melted into a solid cone of base radius 5.2 cm. What is the height (in cm, rounded off to 1 decimal place) of the cone?

- Ans**
- 1. 11.8
 - 2. 12.8
 - 3. 13.5
 - 4. 14.5

Question ID : **264330153794**
Option 1 ID : **264330602641**
Option 2 ID : **264330602639**
Option 3 ID : **264330602642**
Option 4 ID : **264330602640**
Status : **Answered**
Chosen Option : **3**

Q.6 If Rita's salary increases by 5% in the first year and by 2% in the next year, then what is the net percentage increase in her salary after two years?

- Ans**
- 1. 6.1%
 - 2. 5.1%
 - 3. 8.1%
 - 4. 7.1%

Question ID : 264330156218

Option 1 ID : 264330612272

Option 2 ID : 264330612271

Option 3 ID : 264330612274

Option 4 ID : 264330612273

Status : Answered

Chosen Option : 4

Q.7 Mohan can complete a piece of work in 24 days. He worked for 6 days and left the work. Thereafter, Sohan finished the remaining work in 21 days. In how many days, can Mohan and Sohan together complete it?

- Ans**
- 1. $12\frac{12}{13}$ days
 - 2. $12\frac{9}{13}$ days
 - 3. $12\frac{11}{13}$ days
 - 4. $12\frac{10}{13}$ days

Question ID : 264330156238

Option 1 ID : 264330612354

Option 2 ID : 264330612351

Option 3 ID : 264330612353

Option 4 ID : 264330612352

Status : Answered

Chosen Option : 1

Q.8 The volume (in cm^3) of a sphere with diameter 7 cm is:

Take $\pi = \frac{22}{7}$

- Ans**
- 1. 179.66
 - 2. 168.44
 - 3. 197.66
 - 4. 186.44

Question ID : 264330156368

Option 1 ID : 264330612873

Option 2 ID : 264330612874

Option 3 ID : 264330612871

Option 4 ID : 264330612872

Status : Answered

Chosen Option : 1

Q.9 In a fort, 160 men had food for 94 days. After 10 days, 20 men left the fort. How long (in days) would the food last at the same rate?

- Ans**
- 1. 84
 - 2. 90
 - 3. 96
 - 4. 100

Question ID : 264330156495
Option 1 ID : 264330613368
Option 2 ID : 264330613370
Option 3 ID : 264330613369
Option 4 ID : 264330613367
Status : Answered
Chosen Option : 3

Q.10 What sum of money (in ₹) will earn an interest of ₹1,800 at the rate of 6% per annum simple interest in five years?

- Ans**
- 1. 18,000
 - 2. 6,000
 - 3. 8,000
 - 4. 5,000

Question ID : 264330156484
Option 1 ID : 264330613326
Option 2 ID : 264330613323
Option 3 ID : 264330613325
Option 4 ID : 264330613324
Status : Answered
Chosen Option : 2

Q.11 If the ratio among the time taken by three cars to travel a certain distance is 2 : 3 : 5, then the ratio of speeds of these cars will be:

- Ans**
- 1. 10 : 6 : 15
 - 2. 15 : 9 : 8
 - 3. 10 : 15 : 8
 - 4. 15 : 10 : 6

Question ID : 264330156292
Option 1 ID : 264330612567
Option 2 ID : 264330612570
Option 3 ID : 264330612568
Option 4 ID : 264330612569
Status : Answered
Chosen Option : 4

Q.12 The fourth proportion of 2, a and 5a is _____.

Ans

✗ 1. $\frac{2a^2}{5}$

✓ 2. $\frac{5a^2}{2}$

✗ 3. $\frac{2a^2}{3}$

✗ 4. $\frac{5a^2}{3}$

Question ID : 264330153809

Option 1 ID : 264330602702

Option 2 ID : 264330602701

Option 3 ID : 264330602699

Option 4 ID : 264330602700

Status : Answered

Chosen Option : 2

Q.13 Find the LCM of 1288, 230, 276.

Ans

✓ 1. 19,320

✗ 2. 19,230

✗ 3. 9,660

✗ 4. 6,440

Question ID : 264330156092

Option 1 ID : 264330611768

Option 2 ID : 264330611767

Option 3 ID : 264330611769

Option 4 ID : 264330611770

Status : Answered

Chosen Option : 1

Q.14 Study the following table and answer the question given below it.

Distribution of students according to professional courses.

S.No	Course	Faculty			
		Arts		Science	
		Girls	Boys	Girls	Boys
1.	Business Management	25	45	25	65
2.	Type-writing	23	186	20	32
3.	Costing	25	120	12	58
4.	Typewriting & Costing	12	100	3	5

The percentage of students of Arts faculty doing costing only is (round to the nearest integer):

Ans

✗ 1. 18

✗ 2. 15

✗ 3. 10

✓ 4. 27

Question ID : 264330156351

Option 1 ID : 264330612805

Option 2 ID : 264330612804

Option 3 ID : 264330612803

Option 4 ID : 264330612806

Status : Answered

Chosen Option : 4

Q.15 In some quantity of water ,four times the quantity of milk is added and the quantity of the mixture is now 7.5 litres.
How much more milk is to be added to the mixture to have 90% milk in the mixture ?

- Ans
- 1. 9 liters
 - 2. 9.5 liters
 - 3. 6 liters
 - 4. 7.5 liters

Question ID : 264330153800

Option 1 ID : 264330602665

Option 2 ID : 264330602666

Option 3 ID : 264330602663

Option 4 ID : 264330602664

Status : Answered

Chosen Option : 4

Q.16 Evaluate $3\frac{1}{2} - [2\frac{1}{4} \div \{1\frac{1}{4} - \frac{3}{4}(1\frac{1}{2} - \frac{1}{2} - 2\frac{1}{2})\}] :$

- Ans
- 1. $1\frac{21}{38}$
 - 2. $2\frac{19}{18}$
 - 3. $2\frac{21}{38}$
 - 4. $\frac{47}{38}$

Question ID : 264330154038

Option 1 ID : 264330603618

Option 2 ID : 264330603615

Option 3 ID : 264330603616

Option 4 ID : 264330603617

Status : Answered

Chosen Option : 3

Q.17 Arvind, Bilal, Carmen invest ₹49,000 towards a business. Arvind invests ₹5,000 more than Bilal and Bilal invests ₹4,000 more than Carmen. Out of a total profit of ₹98,000, how much does Bilal receive?

- Ans
- 1. ₹34,400
 - 2. ₹33,200
 - 3. ₹30,500
 - 4. ₹32,000

Question ID : 264330156108

Option 1 ID : 264330611831

Option 2 ID : 264330611834


Option 3 ID : 264330611833

Option 4 ID : 264330611832

Status : Answered

Chosen Option : 4

Q.18 The bar graph shows the average marks scored in Mathematics examination (out of 100) by students of 6 divisions of XIIth standard.



What is the ratio of the average marks scored by Division B to Division D?

- Ans**
- 1. 9 : 13
 - 2. 1 : 3
 - 3. 13 : 9
 - 4. 1 : 9

Question ID : 264330154101

Option 1 ID : 264330603867

Option 2 ID : 264330603869

Option 3 ID : 264330603868

Option 4 ID : 264330603870

Status : Answered

Chosen Option : 1

Q.19 An amount of ₹2,000 amounts to ₹2,880 in 2 years. What will be the rate of interest if compounded annually?

- Ans**
- 1. 12%
 - 2. 28%
 - 3. 10%
 - 4. 20%

Question ID : 264330154054

Option 1 ID : 264330603682

Option 2 ID : 264330603680

Option 3 ID : 264330603679

Option 4 ID : 264330603681

Status : Answered

Chosen Option : 4

Q.20 The average weight of some students in class 12th was 56 kg. When seven students whose average weight was 58 kg joined the class, the average weight of all the students increased by 200 gm. Find the number of students in the class in the beginning?

- Ans**
- 1. 56
 - 2. 77
 - 3. 49
 - 4. 63

Question ID : 264330156548

Option 1 ID : 264330613580

Option 2 ID : 264330613582

Option 3 ID : 264330613579

Option 4 ID : 264330613581

Status : Answered

Chosen Option : 4

Q.1 What will come in the place of '?' in the following equation, if '+' and '-' are interchanged and '×' and '÷' are interchanged?

$$23 \div 2 + 41 - 84 \times 14 = ?$$

- Ans**
- 1. 21
 - 2. 1
 - 3. 31
 - 4. 11

Question ID : 264330155668

Option 1 ID : 264330610075

Option 2 ID : 264330610078

Option 3 ID : 264330610077

Option 4 ID : 264330610076

Status : Answered

Chosen Option : 4

Q.2 In a certain code language, 'yes you can' is coded as 'an ef dt' and 'you are enough' is coded as 'sk dt hw'. How is 'you' coded in the given language?

- Ans**
- 1. cf
 - 2. sk
 - 3. dt
 - 4. hw

Question ID : 264330151706

Option 1 ID : 264330594451

Option 2 ID : 264330594454

Option 3 ID : 264330594452

Option 4 ID : 264330594453

Status : Answered

Chosen Option : 3

Q.3 Read the given statements and conclusions carefully. You have to take the given statements to be true even if they seem to be at variance from commonly known facts. You have to decide which conclusion/s logically follow/s from the given statements.

Statements: All phones are flowers. Some flowers are bags. All bags are heavy.

Conclusion I: Some phones are flowers.

Conclusion II: All flowers are bags.

- Ans**
- 1. Neither conclusion (I) nor (II) is follow.
 - 2. Both conclusions (I) and (II) are follow.
 - 3. Only conclusion (II) is follow.
 - 4. Only conclusion (I) is follow.

Question ID : 264330155907

Option 1 ID : 264330611033

Option 2 ID : 264330611034

Option 3 ID : 264330611032

Option 4 ID : 264330611031

Status : Answered

Chosen Option : 1

Q.4 The position of how many letters will remain unchanged if each of the letter in the word 'CHILDREN' is arranged in alphabetical order?

- Ans**
- 1. One
 - 2. Four
 - 3. Three
 - 4. Two

Question ID : 264330154328

Option 1 ID : 264330604775

Option 2 ID : 264330604776

Option 3 ID : 264330604778

Option 4 ID : 264330604777

Status : Answered

Chosen Option : 1

Q.5 Read the given statements and conclusions carefully. You have to take the given statements to be true even if they seem to be at variance from commonly known facts. You have to decide which conclusion/s logically follow/s from the given statements.

Statements: All torches are guitars. Some guitars are bulbs. No bulb is a stove.

Conclusion I: All bulbs are guitars.

Conclusion II: No guitar is a torch.

- Ans**
- 1. Neither conclusion (I) nor (II) is follow.
 - 2. Only conclusion (I) is follow.
 - 3. Both conclusions (I) and (II) are follow.
 - 4. Only conclusion (II) is follow.

Question ID : 264330155912

Option 1 ID : 264330611053

Option 2 ID : 264330611051

Option 3 ID : 264330611054

Option 4 ID : 264330611052

Status : Answered

Chosen Option : 1

Q.6 What will come in place of '?' in the following equation, if '+' and '-' are interchanged and '×' and '÷' are interchanged?

$$15 - 6 + 12 \times 3 + 4 = ?$$

- Ans**
- 1. 5
 - 2. 10
 - 3. 7
 - 4. 9

Question ID : 264330154662

Option 1 ID : 264330606112

Option 2 ID : 264330606111

Option 3 ID : 264330606114

Option 4 ID : 264330606113

Status : Answered

Chosen Option : 1

Q.7 Select the combination of letters that when sequentially placed in the blanks of the given series, will complete the series.

NO_N__NO__ON

- Ans**
- 1. NONNN
 - 2. OOONO
 - 3. ONOON
 - 4. NONON

Question ID : 264330151653

Option 1 ID : 264330594241

Option 2 ID : 264330594240

Option 3 ID : 264330594242

Option 4 ID : 264330594239

Status : Answered

Chosen Option : 1

Q.8 What should come in place of '?' in the given series?

4 19 79 319 1279 ?

- Ans**
- 1. 4875
 - 2. 5299
 - 3. 4913
 - 4. 5119

Question ID : 264330151459

Option 1 ID : 264330593463

Option 2 ID : 264330593466

Option 3 ID : 264330593464

Option 4 ID : 264330593465

Status : Answered

Chosen Option : 4

Q.9 Six people, Deepak, Gauri, Babita, Ira, Farheen and Hema are sitting in a straight line, facing north. Deepak sits 2nd from the left end. Gauri sits 2nd to the right of Deepak. Ira sits 2nd to the right of Gauri. Farheen sits 3rd to the left of Ira. Babita sits 2nd to the left of Farheen. Who sits 3rd to the right of Deepak?

- Ans**
- 1. Farheen
 - 2. Hema
 - 3. Babita
 - 4. Ira

Question ID : 264330155661

Option 1 ID : 264330610050

Option 2 ID : 264330610047

Option 3 ID : 264330610049

Option 4 ID : 264330610048

Status : Answered

Chosen Option : 2

Q.10 What should come in place of '?' in the given series?

5 23 95 ? 1535 6143 24575

- Ans
- 1. 383
 - 2. 347
 - 3. 312
 - 4. 361

Question ID : 264330151493
 Option 1 ID : 264330593602
 Option 2 ID : 264330593600
 Option 3 ID : 264330593599
 Option 4 ID : 264330593601
 Status : Answered
 Chosen Option : 1

Q.11 Select the word-pair that best represents a similar relationship to the one expressed in the pair of words given below.

(The words must be considered as meaningful English words and must not be related to each other based on the number of letters/number of consonants/vowels in the word)

Legend : Map

- Ans
- 1. Volume : Guidebook
 - 2. Glossary : Text
 - 3. Column : Essay
 - 4. Profession : Biography

Question ID : 264330154642
 Option 1 ID : 264330606031
 Option 2 ID : 264330606033
 Option 3 ID : 264330606034
 Option 4 ID : 264330606032
 Status : Answered
 Chosen Option : 1

Q.12 What should come in place of ? in the given series based on the English alphabetical order?

CSP, EUQ, GWR, IYS, ?

- Ans
- 1. JBS
 - 2. LBT
 - 3. KAT
 - 4. JAR

Question ID : 264330155783
 Option 1 ID : 264330610536
 Option 2 ID : 264330610538
 Option 3 ID : 264330610535
 Option 4 ID : 264330610537
 Status : Answered
 Chosen Option : 3

Q.13 Find out the correct alternative that when filled in the blanks in the same sequence will make the series logically complete.

BK_Y _KUT R_PO MKK_ HK_E

- Ans**
- 1. WKBFP
 - 2. WBHZP
 - 3. ZWKJF
 - 4. ZKWLF

Question ID : 264330154729

Option 1 ID : 264330606379

Option 2 ID : 264330606381

Option 3 ID : 264330606382

Option 4 ID : 264330606380

Status : Answered

Chosen Option : 3

Q.14 In a certain code language, 'BACK' is coded as '17' and 'DTDC' is coded as '31'. What is the code for 'JAAM' in the given code language?

- Ans**
- 1. 35
 - 2. 20
 - 3. 40
 - 4. 25

Question ID : 264330155819

Option 1 ID : 264330610680

Option 2 ID : 264330610681

Option 3 ID : 264330610682

Option 4 ID : 264330610679

Status : Answered

Chosen Option : 4

Q.15 In the following number-pairs, the second number is obtained by applying certain mathematical operations to the first number. Select the set in which the numbers are related in the same way as are the numbers of the following sets.

(NOTE: Operations should be performed on the whole numbers, without breaking down the numbers into its constituent digits. E.g. 13 – Operations on 13 such as adding / subtracting / multiplying etc. to 13 can be performed.

Breaking down 13 into 1 and 3 and then performing mathematical operations on 1 and 3 is not allowed)

8, 128

9, 162

- Ans**
- 1. 11, 124
 - 2. 14, 392
 - 3. 12, 149
 - 4. 13, 170

Question ID : 264330151619

Option 1 ID : 264330594103

Option 2 ID : 264330594106

Option 3 ID : 264330594104

Option 4 ID : 264330594105

Status : Answered

Chosen Option : 2

Q.16 Which figure should replace the question mark (?) if the following figure series were to be continued?

7	V	C	7	=	C	□	=	
=	↑	Z	Z	V	=	V	3	7
3	D	↑	3	Z	↑	3	Z	?

Ans

✓ 1.

	V	□
C	Z	=
7	3	

✗ 2.

	=	V
C	Z	□
7	3	

✗ 3.

	V	□
3	7	=
Z	C	

✗ 4.

	=	V
3	7	□
Z	C	

Question ID : 264330154761

Option 1 ID : 264330606507

Option 2 ID : 264330606509

Option 3 ID : 264330606510

Option 4 ID : 264330606508

Status : Answered

Chosen Option : 1

Q.17 What should come in place of '?' in the given series?

11 59 299 1499 7499 ?

Ans

✗ 1. 38199

✗ 2. 37699

✓ 3. 37499

✗ 4. 38499

Question ID : 264330151469

Option 1 ID : 264330593505

Option 2 ID : 264330593504

Option 3 ID : 264330593503

Option 4 ID : 264330593506

Status : Answered

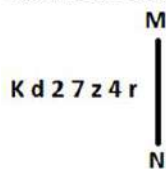
Chosen Option : 3

Q.18 In the following number-pairs, the second number is obtained by applying certain mathematical operations to the first number. Select the set in which the numbers are related in the same way as are the numbers of the following sets.
 (NOTE : Operations should be performed on the whole numbers, without breaking down the numbers into its constituent digits. E.g. 13 – Operations on 13 such as adding /deleting /multiplying etc. to 13 can be performed. Breaking down 13 into 1 and 3 and then performing mathematical operations on 1 and 3 is not allowed)
 16 : 41
 11 : 26

- Ans
- 1. 7 : 28
 - 2. 5 : 15
 - 3. 21 : 84
 - 4. 12 : 29

Question ID : 264330154650
 Option 1 ID : 264330606065
 Option 2 ID : 264330606066
 Option 3 ID : 264330606063
 Option 4 ID : 264330606064
 Status : Answered
 Chosen Option : 4

Q.19 Select the correct mirror image of the given figure when the mirror is placed at MN as shown below.



- Ans
- 1. K p 5 7 z 4 r
 - 2. K q 5 7 z 4 r
 - 3. K q 2 7 z 4 r
 - 4. K q 5 7 z 4 r

Question ID : 264330151506
 Option 1 ID : 264330593654
 Option 2 ID : 264330593652
 Option 3 ID : 264330593651
 Option 4 ID : 264330593653
 Status : Answered
 Chosen Option : 2

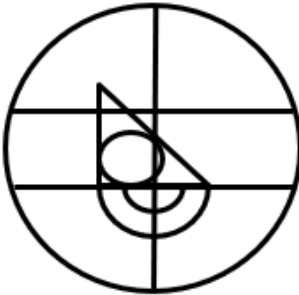
Q.20 Select the option figure in which the given figure (X) is embedded as its part (rotation is NOT allowed).



(X)

Ans

✗ 1.



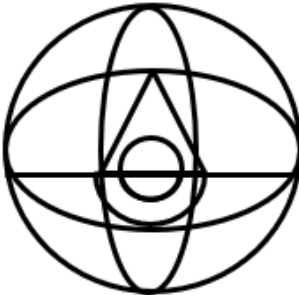
✗ 2.



✓ 3.



✗ 4.



Question ID : 264330151725

Option 1 ID : 264330594527

Option 2 ID : 264330594528

Option 3 ID : 264330594530

Option 4 ID : 264330594529

Status : Answered

Chosen Option : 3

Q.1 What is the purpose of a savings account?

- Ans 1. Obtaining a mortgage loan
 2. Earning interest on deposits
 3. Making day-to-day transactions
 4. Paying bills online

Question ID : 264330157301
Option 1 ID : 264330616569
Option 2 ID : 264330616568
Option 3 ID : 264330616567
Option 4 ID : 264330616570
Status : Answered
Chosen Option : 3

Q.2 According to the Census of India 2011, the female literacy rate was recorded as _____.

- Ans 1. 75.35%
 2. 65.46%
 3. 55.84%
 4. 70.24%

Question ID : 264330161557
Option 1 ID : 264330633557
Option 2 ID : 264330633558
Option 3 ID : 264330633555
Option 4 ID : 264330633556
Status : Answered
Chosen Option : 2

Q.3 Which of the following crops is most suitable for black soil?

- Ans 1. Soybean
 2. Maize
 3. Cotton
 4. Barley

Question ID : 264330161316
Option 1 ID : 264330632591
Option 2 ID : 264330632592
Option 3 ID : 264330632594
Option 4 ID : 264330632593
Status : Answered
Chosen Option : 3

Q.4 In India, the 'Aus', 'Aman' and 'Boro' terms are associated with which crop from the following?

- Ans 1. Wheat
 2. Gram
 3. Sugarcane
 4. Paddy

Question ID : 264330161510
Option 1 ID : 264330633367
Option 2 ID : 264330633370
Option 3 ID : 264330633369
Option 4 ID : 264330633368
Status : Answered
Chosen Option : 4

Q.5 The President of India conferred the Padma Shri award to Gurcharan Singh for his distinguished service in the field of _____ in 2023.

- Ans
- 1. Tennis
 - 2. Cricket
 - 3. Football
 - 4. Badminton

Question ID : 264330161443
Option 1 ID : 264330633102
Option 2 ID : 264330633099
Option 3 ID : 264330633100
Option 4 ID : 264330633101
Status : Not Answered
Chosen Option : --

Q.6 Who moved the resolution proposing that the National Flag of India be a 'horizontal tricolour of saffron, white and dark green in equal proportion'?

- Ans
- 1. Sardar Vallabhbhai Patel
 - 2. Jawaharlal Nehru
 - 3. Mahatma Gandhi
 - 4. Dr Rajendra Prasad

Question ID : 264330161747
Option 1 ID : 264330634317
Option 2 ID : 264330634316
Option 3 ID : 264330634315
Option 4 ID : 264330634318
Status : Answered
Chosen Option : 2

Q.7 In which of the following States was the first Janjatiya Khel Mahotsav held?

- Ans
- 1. Odisha
 - 2. Chhattisgarh
 - 3. Jharkhand
 - 4. Andhra Pradesh

Question ID : 264330161127
Option 1 ID : 264330631839
Option 2 ID : 264330631841
Option 3 ID : 264330631840
Option 4 ID : 264330631842
Status : Answered
Chosen Option : 3

Q.8 Identify the Indian singer who sang the song 'Ae mere watan ke logon jara akhon mein bharlo paani...' before the first Prime Minister of India, Pandit Jawaharlal Nehru.

- Ans
- 1. Lata Mangeshkar
 - 2. Mohammad Rafi
 - 3. Mukesh
 - 4. Asha Bhosle

Question ID : 264330160980
Option 1 ID : 264330631251
Option 2 ID : 264330631254
Option 3 ID : 264330631253
Option 4 ID : 264330631252
Status : Answered
Chosen Option : 1

Q.9 Which regulatory body in India is responsible for overseeing and regulating Micro Finance Institutions?

- Ans
- 1. Securities and Exchange Board of India (SEBI)
 - 2. Small Industries Development Bank of India (SIDBI)
 - 3. Reserve Bank of India (RBI)
 - 4. National Bank for Agriculture and Rural Development (NABARD)

Question ID : 264330157285
Option 1 ID : 264330616504
Option 2 ID : 264330616505
Option 3 ID : 264330616503
Option 4 ID : 264330616506
Status : Answered
Chosen Option : 2

Q.10 Who among the following was the viceroy of India at the time of India's independence from colonial rule on 15 August 1947?

- Ans
- 1. Lord Wavell
 - 2. Lord Willingdon
 - 3. Lord Mountbatten
 - 4. Lord Linlithgow

Question ID : 264330160824
Option 1 ID : 264330630628
Option 2 ID : 264330630630
Option 3 ID : 264330630627
Option 4 ID : 264330630629
Status : Answered
Chosen Option : 3

Q.11 Which of the following is the legislative organ of the Union Government?

- Ans
- 1. Cabinet
 - 2. Supreme Court
 - 3. Executive
 - 4. Parliament

Question ID : 264330159920
Option 1 ID : 264330627030
Option 2 ID : 264330627029
Option 3 ID : 264330627027
Option 4 ID : 264330627028
Status : Answered
Chosen Option : 4

Q.12 Due to rapid urbanisation, the human lifestyle has changed severely; obesity is a major health issue in such condition. Which of the following is a reason for obesity?

- Ans
- 1. Excessive consumption of water
 - 2. Excessive intake of high calorie foods
 - 3. Lack of protein
 - 4. Lack of vitamins in regular diet

Question ID : 264330156610
Option 1 ID : 264330613828
Option 2 ID : 264330613827
Option 3 ID : 264330613830
Option 4 ID : 264330613829
Status : Answered
Chosen Option : 2

Q.13 Who won the Best Playback Singer (Male) award in the 68th Filmfare Awards 2023?

- Ans
- 1. Mohit Chauhan
 - 2. Shaan
 - 3. Arijit Singh
 - 4. Amit Mishra

Question ID : 264330155516
Option 1 ID : 264330609467
Option 2 ID : 264330609469
Option 3 ID : 264330609468
Option 4 ID : 264330609470
Status : Answered
Chosen Option : 3

Q.14 Where was Shree Narayana Dharma Paripalana Yogam founded?

- Ans
- 1. Tamil Nādu
 - 2. Kerala
 - 3. Karnataka
 - 4. Telangana

Question ID : 264330160890
Option 1 ID : 264330630892
Option 2 ID : 264330630891
Option 3 ID : 264330630894
Option 4 ID : 264330630893
Status : Not Answered
Chosen Option : --

Q.15 Who is the renowned kathak dancer, student of 'Pandit Birju Maharaj' and also served as an officer with Indian Audit and Accounts Services?

- Ans
- 1. Sonal Mansingh
 - 2. Guru Bipin Singh
 - 3. Shovana Narayan
 - 4. Padma Subrahmanayam

Question ID : 264330159063
Option 1 ID : 264330623613
Option 2 ID : 264330623611
Option 3 ID : 264330623612
Option 4 ID : 264330623614
Status : Answered
Chosen Option : 3

Q.16 Shama Bhate received the Sangeet Natak Akademi Award-2021 (given in February 2023) for her contribution to which dance form of the following?

- Ans**
- 1. Manipuri
 - 2. Kathak
 - 3. Bharatanatyam
 - 4. Mohiniyattam

Question ID : **264330155518**
Option 1 ID : **264330609477**
Option 2 ID : **264330609476**
Option 3 ID : **264330609475**
Option 4 ID : **264330609478**
Status : **Answered**
Chosen Option : **1**

Q.17 Which of the following Indus Valley sites is now located in Pakistan?

- Ans**
- 1. Harappa
 - 2. Lothal
 - 3. Alamgirpur
 - 4. Kalibangan

Question ID : **264330162697**
Option 1 ID : **264330638108**
Option 2 ID : **264330638110**
Option 3 ID : **264330638107**
Option 4 ID : **264330638109**
Status : **Answered**
Chosen Option : **1**

Q.18 In April 2023, Satwiksairaj Rankireddy and Chirag Shetty made history, becoming the first Indian men's doubles pair to win a gold medal at the Badminton Asia Championships. Where was this championship held?

- Ans**
- 1. Singapore
 - 2. Dubai
 - 3. Qatar
 - 4. Malaysia

Question ID : **264330161153**
Option 1 ID : **264330631946**
Option 2 ID : **264330631944**
Option 3 ID : **264330631943**
Option 4 ID : **264330631945**
Status : **Not Answered**
Chosen Option : **--**

Q.19 Which of the following states has introduced a dedicated Semiconductor Policy 2022-27 with a view to generate at least 2,00,000 new employment opportunities in the state?

- Ans
- 1. Andhra Pradesh
 - 2. Maharashtra
 - 3. Gujarat
 - 4. Kerala

Question ID : 264330161409
Option 1 ID : 264330632965
Option 2 ID : 264330632963
Option 3 ID : 264330632964
Option 4 ID : 264330632966
Status : Answered
Chosen Option : 1

Q.20 The classical dance style of Bharatanatyam belongs to the state of _____.

- Ans
- 1. Karnataka
 - 2. Tamil Nadu
 - 3. Assam
 - 4. Rajasthan

Question ID : 264330159049
Option 1 ID : 264330623555
Option 2 ID : 264330623556
Option 3 ID : 264330623557
Option 4 ID : 264330623558
Status : Answered
Chosen Option : 2

Q.21 Which of the following peninsular rivers of India is a west flowing river?

- Ans
- 1. Kaveri
 - 2. Narmada
 - 3. Godavari
 - 4. Krishna

Question ID : 264330161496
Option 1 ID : 264330633312
Option 2 ID : 264330633314
Option 3 ID : 264330633311
Option 4 ID : 264330633313
Status : Answered
Chosen Option : 1

Q.22 Which Articles of the Constitution of India deal with the Union and its territory?

- Ans
- 1. Articles 5-11
 - 2. Articles 1-4
 - 3. Articles 12-35
 - 4. Article 36-51

Question ID : 264330159894
Option 1 ID : 264330626924
Option 2 ID : 264330626923
Option 3 ID : 264330626925
Option 4 ID : 264330626926
Status : Answered
Chosen Option : 2

Q.23 'The Great Indian Novel' is a satirical novel by _____.

- Ans
- 1. Suryakant Tripathi
 - 2. KR Narayan
 - 3. Munshi Prem Chand
 - 4. Shashi Tharoor

Question ID : 264330155496
Option 1 ID : 264330609387
Option 2 ID : 264330609388
Option 3 ID : 264330609389
Option 4 ID : 264330609390
Status : Not Answered
Chosen Option : --

Q.24 What is the systematic name of a colourless gas with a faint, ethereal odour called acetylene, widely used for welding?

- Ans
- 1. Ethyne
 - 2. Ethanoic anhydride
 - 3. Azoethane
 - 4. Ethyl acetate

Question ID : 264330161050
Option 1 ID : 264330631532
Option 2 ID : 264330631533
Option 3 ID : 264330631534
Option 4 ID : 264330631531
Status : Not Answered
Chosen Option : --

Q.25 Identify the correct pair of novel and its writer from the following.

- Ans
- 1. Seven Summers - Mulk Raj Anand
 - 2. The White Tiger - Kiran Desai
 - 3. A Suitable Boy- Amitav Ghosh
 - 4. The Inheritance of Loss -Aravind Adiga

Question ID : 264330155501
Option 1 ID : 264330609409
Option 2 ID : 264330609410
Option 3 ID : 264330609407
Option 4 ID : 264330609408
Status : Not Answered
Chosen Option : --

Q.1 The following sentence has been divided into four parts. Identify the part that contains an error.

(A) Taylor, Richard, and / (B) Francis plays for / (C) the state / (D) basketball team.

- Ans
- 1. D
 - 2. A
 - 3. C
 - 4. B

Question ID : 264330152616
Option 1 ID : 264330598067
Option 2 ID : 264330598070
Option 3 ID : 264330598068
Option 4 ID : 264330598069
Status : Answered
Chosen Option : 4

Q.2 Select the most appropriate meaning of the given idiom.
Pay an arm and a leg for something

- Ans
- 1. Be devoted to unwanted things
 - 2. Pay a lot of money for something
 - 3. Give a lot of love and care to someone
 - 4. Pay a lot of attention to an incident

Question ID : 264330153438
Option 1 ID : 264330601277
Option 2 ID : 264330601275
Option 3 ID : 264330601278
Option 4 ID : 264330601276
Status : Answered
Chosen Option : 2

Q.3 The following sentence has been divided into parts. One of them may contain an error.
Select the part that contains the error from the given options. If you don't find any error, mark 'No error' as your answer.

As they driven through the dark, twisting lane / down which they had walked earlier,
Lucius heard / the whistling of the night air in his ears.

- Ans
- 1. down which they had walked earlier, Lucius heard
 - 2. No error
 - 3. the whistling of the night air in his ears.
 - 4. As they driven through the dark, twisting lane

Question ID : 264330153212
Option 1 ID : 264330600409
Option 2 ID : 264330600410
Option 3 ID : 264330600407
Option 4 ID : 264330600408
Status : Answered
Chosen Option : 3

Q.4 Select the most appropriate synonym of the given word.
Trivial

- Ans 1. Minor
 2. Fatal
 3. Decisive
 4. Formal

Question ID : 264330152683
Option 1 ID : 264330598338
Option 2 ID : 264330598335
Option 3 ID : 264330598337
Option 4 ID : 264330598336
Status : Answered
Chosen Option : 1

Q.5 Select the most appropriate word to fill in the blank.
Ministry of education has announced that students can _____ the Board Examinations twice.

- Ans 1. take
 2. participate
 3. give
 4. get

Question ID : 264330153506
Option 1 ID : 264330601537
Option 2 ID : 264330601538
Option 3 ID : 264330601536
Option 4 ID : 264330601535
Status : Answered
Chosen Option : 1

Q.6 Select the most appropriate meaning of the underlined idiom in the given sentence.

A man of character, he stuck to his guns even in the most difficult situations.

- Ans 1. To do things that would please people
 2. To behave disrespectfully
 3. To find a treasure
 4. To stand firm against all difficulties and challenges

Question ID : 264330152880
Option 1 ID : 264330599113
Option 2 ID : 264330599111
Option 3 ID : 264330599112
Option 4 ID : 264330599114
Status : Answered
Chosen Option : 4

Q.7 Select the most appropriate meaning of the underlined segment in the given sentence.
After her husband passed away, Jane had to learn to bite the bullet and take care of the household on her own.

- Ans
- 1. Create a difficult situation
 - 2. Accept a difficult situation bravely
 - 3. Criticise someone harshly
 - 4. Run away from a difficult situation

Question ID : 264330152922
Option 1 ID : 264330599269
Option 2 ID : 264330599268
Option 3 ID : 264330599270
Option 4 ID : 264330599267
Status : Answered
Chosen Option : 2

Q.8 Select the option that can be used as a one-word substitute for the given phrase.
One who lends money to others at a very high rate of interest.

- Ans
- 1. Curator
 - 2. Bankrupt
 - 3. Usurer
 - 4. Numismatist

Question ID : 264330152674
Option 1 ID : 264330598301
Option 2 ID : 264330598302
Option 3 ID : 264330598299
Option 4 ID : 264330598300
Status : Answered
Chosen Option : 4

Q.9 Parts of the following sentence have been given as options. Select the option that contains an error.
The platinum is a precious metal.

- Ans
- 1. is
 - 2. The platinum
 - 3. a
 - 4. precious metal

Question ID : 264330155201
Option 1 ID : 264330608264
Option 2 ID : 264330608263
Option 3 ID : 264330608265
Option 4 ID : 264330608266
Status : Answered
Chosen Option : 2

Q.10 Select the most appropriate option to fill in the blank.
All praised him when he soared in the business world, but the same people _____ him when he failed in business.

- Ans
- 1. nourished
 - 2. criticised
 - 3. supported
 - 4. dramatised

Question ID : 264330153576
Option 1 ID : 264330601799
Option 2 ID : 264330601800
Option 3 ID : 264330601802
Option 4 ID : 264330601801
Status : Answered
Chosen Option : 2

Q.11 Parts of the following sentence have been underlined and given as options. Select the option that contains an error.
What most off us want most is to move forward.

- Ans
- 1. most off
 - 2. is to
 - 3. want most
 - 4. move forward

Question ID : 264330153209
Option 1 ID : 264330600395
Option 2 ID : 264330600397
Option 3 ID : 264330600396
Option 4 ID : 264330600398
Status : Answered
Chosen Option : 1

Q.12 Select the word which means the same as the group of words given.
That which can't be read.

- Ans
- 1. Inaccessible
 - 2. Incurable
 - 3. Illegible
 - 4. Irrelevant

Question ID : 264330152570
Option 1 ID : 264330597883
Option 2 ID : 264330597884
Option 3 ID : 264330597885
Option 4 ID : 264330597886
Status : Answered
Chosen Option : 3

Q.13 Select the INCORRECTLY spelt word.

- Ans 1. Acknowlege
 2. Territory
 3. Excellence
 4. Business

Question ID : 264330152688
Option 1 ID : 264330598356
Option 2 ID : 264330598358
Option 3 ID : 264330598357
Option 4 ID : 264330598355
Status : Answered
Chosen Option : 1

Q.14 Select the most appropriate ANTONYM of the given word.
Authentic

- Ans 1. Moderate
 2. Actual
 3. False
 4. Wise

Question ID : 264330152675
Option 1 ID : 264330598306
Option 2 ID : 264330598303
Option 3 ID : 264330598304
Option 4 ID : 264330598305
Status : Answered
Chosen Option : 3

Q.15 Select the most appropriate idiom to fill in the blank.
Please tell me about the meeting _____.

- Ans 1. in a nutshell
 2. in a stew
 3. in a huff
 4. in a spin

Question ID : 264330152597
Option 1 ID : 264330597992
Option 2 ID : 264330597993
Option 3 ID : 264330597994
Option 4 ID : 264330597991
Status : Answered
Chosen Option : 1

Q.16 Select the most appropriate option to fill in the blank.
Augmented Reality (AR) continues to develop and become more _____ among a wide range of applications.

- Ans
- 1. rare
 - 2. amicable
 - 3. idealistic
 - 4. pervasive

Question ID : 264330151905
Option 1 ID : 264330595235
Option 2 ID : 264330595237
Option 3 ID : 264330595238
Option 4 ID : 264330595236
Status : Answered
Chosen Option : 3

Q.17 Select the INCORRECTLY spelt word.

- Ans
- 1. Grammar
 - 2. Pleasant
 - 3. Familiar
 - 4. Aweful

Question ID : 264330152828
Option 1 ID : 264330598905
Option 2 ID : 264330598906
Option 3 ID : 264330598903
Option 4 ID : 264330598904
Status : Answered
Chosen Option : 4

Q.18 Select the INCORRECTLY spelt word in the given sentence.
The handloom shop at the Ring Road has many kinds of bags, such as paper, leather, cloth and cannabis.

- Ans
- 1. Paper
 - 2. Cannabis
 - 3. Leather
 - 4. Cloth

Question ID : 264330153302
Option 1 ID : 264330600763
Option 2 ID : 264330600766
Option 3 ID : 264330600764
Option 4 ID : 264330600765
Status : Answered
Chosen Option : 2

Q.19 Select the most appropriate option to fill in the blank.
A/An _____ fellow cannot become an ideal teacher.

- Ans 1. idle
 2. bright
 3. intelligent
 4. honest

Question ID : 264330153355
 Option 1 ID : 264330600971
 Option 2 ID : 264330600974
 Option 3 ID : 264330600972
 Option 4 ID : 264330600973
 Status : Answered
 Chosen Option : 1

Q.20 Select the most appropriate option that can substitute the underlined segment in the given sentence.

I considered Geography as an easier subject.

- Ans 1. the easy
 2. the easier
 3. an easiest
 4. an easy

Question ID : 264330155423
 Option 1 ID : 264330609100
 Option 2 ID : 264330609101
 Option 3 ID : 264330609102
 Option 4 ID : 264330609099
 Status : Answered
 Chosen Option : 4

Comprehension:

In the following passage some words have been deleted. Read the passage carefully and select the most appropriate option to fill in each blank.

The most common hazard in forests is forest fire. Forest fires are as old as the forests themselves. They pose a 1. _____ not only to the forest wealth but also to the entire regime to fauna and flora seriously disturbing the biodiversity and the ecology and environment of a region. During summer, when there is no rain for months, the forests 2. _____ littered with dry senescent leaves and twinges, which could burst into flames ignited by the slightest spark. The Himalayan forests, particularly, Garhwal Himalayas have been burning 3. _____ during the last few summers, with colossal loss of vegetation cover of that region. The youngest mountain ranges of the Himalayas are the most 4. _____ stretches of the world susceptible to forest fires. The forests of the Western are more 5. _____ vulnerable to forest fires as compared to those in the Eastern Himalayas. This is because forests of the Eastern Himalayas grow in high rain density.

SubQuestion No : 21

Q.21 Select the most appropriate option to fill in blank no.1.

- Ans 1. mercy
 2. trend
 3. failure
 4. threat

Question ID : 264330151933
 Option 1 ID : 264330595344
 Option 2 ID : 264330595346
 Option 3 ID : 264330595343
 Option 4 ID : 264330595345
 Status : Answered
 Chosen Option : 4

Comprehension:

In the following passage some words have been deleted. Read the passage carefully and select the most appropriate option to fill in each blank.

The most common hazard in forests is forest fire. Forest fires are as old as the forests themselves. They pose a 1. _____ not only to the forest wealth but also to the entire regime to fauna and flora seriously disturbing the biodiversity and the ecology and environment of a region. During summer, when there is no rain for months, the forests 2. _____ littered with dry senescent leaves and twinges, which could burst into flames ignited by the slightest spark. The Himalayan forests, particularly, Garhwal Himalayas have been burning 3. _____ during the last few summers, with colossal loss of vegetation cover of that region. The youngest mountain ranges of the Himalayas are the most 4. _____ stretches of the world susceptible to forest fires. The forests of the Western are more 5. _____ vulnerable to forest fires as compared to those in the Eastern Himalayas. This is because forests of the Eastern Himalayas grow in high rain density.

SubQuestion No : 22

Q.22 Select the most appropriate option to fill in blank no.2.

- Ans 1. keep
 2. build
 3. become
 4. drive

Question ID : 264330151934

Option 1 ID : 264330595349

Option 2 ID : 264330595350

Option 3 ID : 264330595348

Option 4 ID : 264330595347

Status : Answered

Chosen Option : 3

Comprehension:

In the following passage some words have been deleted. Read the passage carefully and select the most appropriate option to fill in each blank.

The most common hazard in forests is forest fire. Forest fires are as old as the forests themselves. They pose a 1. _____ not only to the forest wealth but also to the entire regime to fauna and flora seriously disturbing the biodiversity and the ecology and environment of a region. During summer, when there is no rain for months, the forests 2. _____ littered with dry senescent leaves and twinges, which could burst into flames ignited by the slightest spark. The Himalayan forests, particularly, Garhwal Himalayas have been burning 3. _____ during the last few summers, with colossal loss of vegetation cover of that region. The youngest mountain ranges of the Himalayas are the most 4. _____ stretches of the world susceptible to forest fires. The forests of the Western are more 5. _____ vulnerable to forest fires as compared to those in the Eastern Himalayas. This is because forests of the Eastern Himalayas grow in high rain density.

SubQuestion No : 23

Q.23 Select the most appropriate option to fill in blank no.3.

- Ans 1. rarely
 2. regularly
 3. badly
 4. enough

Question ID : 264330151935

Option 1 ID : 264330595354

Option 2 ID : 264330595351

Option 3 ID : 264330595353

Option 4 ID : 264330595352

Status : Answered

Chosen Option : 2

Comprehension:

In the following passage some words have been deleted. Read the passage carefully and select the most appropriate option to fill in each blank.

The most common hazard in forests is forest fire. Forest fires are as old as the forests themselves. They pose a 1. _____ not only to the forest wealth but also to the entire regime to fauna and flora seriously disturbing the biodiversity and the ecology and environment of a region. During summer, when there is no rain for months, the forests 2. _____ littered with dry senescent leaves and twinges, which could burst into flames ignited by the slightest spark. The Himalayan forests, particularly, Garhwal Himalayas have been burning 3. _____ during the last few summers, with colossal loss of vegetation cover of that region. The youngest mountain ranges of the Himalayas are the most 4. _____ stretches of the world susceptible to forest fires. The forests of the Western are more 5. _____ vulnerable to forest fires as compared to those in the Eastern Himalayas. This is because forests of the Eastern Himalayas grow in high rain density.

SubQuestion No : 24

Q.24 Select the most appropriate option to fill in blank no.4.

- Ans 1. outrageous
 2. vulnerable
 3. greasy
 4. mysterious

Question ID : 264330151936

Option 1 ID : 264330595356

Option 2 ID : 264330595358

Option 3 ID : 264330595357

Option 4 ID : 264330595355

Status : Answered

Chosen Option : 2

Comprehension:

In the following passage some words have been deleted. Read the passage carefully and select the most appropriate option to fill in each blank.

The most common hazard in forests is forest fire. Forest fires are as old as the forests themselves. They pose a 1. _____ not only to the forest wealth but also to the entire regime to fauna and flora seriously disturbing the biodiversity and the ecology and environment of a region. During summer, when there is no rain for months, the forests 2. _____ littered with dry senescent leaves and twinges, which could burst into flames ignited by the slightest spark. The Himalayan forests, particularly, Garhwal Himalayas have been burning 3. _____ during the last few summers, with colossal loss of vegetation cover of that region. The youngest mountain ranges of the Himalayas are the most 4. _____ stretches of the world susceptible to forest fires. The forests of the Western are more 5. _____ vulnerable to forest fires as compared to those in the Eastern Himalayas. This is because forests of the Eastern Himalayas grow in high rain density.

SubQuestion No : 25

Q.25 Select the most appropriate option to fill in blank no.5.

- Ans 1. closely
 2. frequently
 3. deeply
 4. barely

Question ID : 264330151937

Option 1 ID : 264330595362

Option 2 ID : 264330595360

Option 3 ID : 264330595361

Option 4 ID : 264330595359

Status : Answered

Chosen Option : 3

SSC MTS 2023 Tier 1 Sept 11 Shift 2 Question Paper with Answers

Roll Number	
Candidate Name	
Exam Date	11/09/2023
Exam Time	12:30 PM - 2:30 PM
Subject	MTS Non Tech Havaldar CBIC and CBN Examination 2023

Section : Numerical and Mathematical Ability

Q.1 The price of a bed is first increased by 32% and later on decreased by 20% due to reduction in sales. Find the net percentage change in the final price of the bed.

- Ans**
- ✓ 1. 5.6%
 - ✗ 2. 6.2%
 - ✗ 3. 7.5%
 - ✗ 4. 4.9%

Question ID : 264330156179

Option 1 ID : 264330612115

Option 2 ID : 264330612116

Option 3 ID : 264330612117

Option 4 ID : 264330612118

Status : Answered

Chosen Option : 1

Q.2 A cone has base diameter 4 m and height 1.5 m. Find the slant height of the cone (in m).

- Ans**
- ✗ 1. 2.1
 - ✗ 2. 2.3
 - ✗ 3. 2.7
 - ✓ 4. 2.5

Question ID : 264330156244

Option 1 ID : 264330612375

Option 2 ID : 264330612376

Option 3 ID : 264330612378

Option 4 ID : 264330612377

Status : Answered

Chosen Option : 4

Q.3 Robin purchases a fan for ₹2,000 and later sells it at a loss of 15%. At what price did he sell the fan?

- Ans**
- 1. ₹1,900
 - 2. ₹1,800
 - 3. ₹1,700
 - 4. ₹2,100

Question ID : 264330156103
Option 1 ID : 264330611814
Option 2 ID : 264330611812
Option 3 ID : 264330611811
Option 4 ID : 264330611813
Status : Answered
Chosen Option : 3

Q.4 What is the compound interest (in ₹) on ₹20,500 for 2 years at 10% per annum, if the interest is compounded annually?

- Ans**
- 1. 5,403
 - 2. 4,305
 - 3. 4,530
 - 4. 4,350

Question ID : 264330153773
Option 1 ID : 264330602556
Option 2 ID : 264330602558
Option 3 ID : 264330602557
Option 4 ID : 264330602555
Status : Answered
Chosen Option : 2

Q.5 What is the value of R, if, $10(8 + 4R) \div (12 \times 5) - 5 \times 2^3 = 6$?

- Ans**
- 1. 86
 - 2. 68
 - 3. 76
 - 4. 67

Question ID : 264330153756
Option 1 ID : 264330602488
Option 2 ID : 264330602487
Option 3 ID : 264330602489
Option 4 ID : 264330602490
Status : Answered
Chosen Option : 4

Q.6 A and B working separately can do a piece of work in 16 days and 28 days, respectively. If they work on alternate days beginning with B, in how many days will the work be completed?

- Ans**
- 1. $18\frac{1}{2}$
 - 2. $20\frac{1}{2}$
 - 3. $21\frac{1}{2}$
 - 4. $19\frac{1}{2}$

Question ID : 264330155758

Option 1 ID : 264330610438

Option 2 ID : 264330610436

Option 3 ID : 264330610435

Option 4 ID : 264330610437

Status : Answered

Chosen Option : 2

Q.7 The average weight of 15 parcels is 20 kg. Addition of another new parcel increases the average weight by 250 grams. What is the weight of the new parcel?

- Ans**
- 1. 28 kg
 - 2. 24 kg
 - 3. 22 kg
 - 4. 26 kg

Question ID : 264330156291

Option 1 ID : 264330612563

Option 2 ID : 264330612564

Option 3 ID : 264330612565

Option 4 ID : 264330612566

Status : Answered

Chosen Option : 2

Q.8 ₹8,000 becomes ₹9,800 in three years at simple interest rate. If the rate of interest becomes two times of itself, then what will be the amount of the same principle in four years?

- Ans**
- 1. ₹10,800
 - 2. ₹11,800
 - 3. ₹12,800
 - 4. ₹13,500

Question ID : 264330158214

Option 1 ID : 264330620217

Option 2 ID : 264330620215

Option 3 ID : 264330620216

Option 4 ID : 264330620218

Status : Answered

Chosen Option : 3

Q.9 Neha walks at the rate of 8 km/h and crosses a bridge in 27 minutes. What is the length of the bridge in metres?

- Ans**
- 1. 4850
 - 2. 3600
 - 3. 3000
 - 4. 2400

Question ID : 264330156112
Option 1 ID : 264330611850
Option 2 ID : 264330611848
Option 3 ID : 264330611847
Option 4 ID : 264330611849
Status : Answered
Chosen Option : 2

Q.10 Sanjay wants to exactly measure the lengths 7000 mm, 3850 mm and 12950 mm using a single measuring tape. What will be the greatest possible length (in cm) of the measuring tape?

- Ans**
- 1. 40
 - 2. 45
 - 3. 35
 - 4. 30

Question ID : 264330155682
Option 1 ID : 264330610133
Option 2 ID : 264330610134
Option 3 ID : 264330610132
Option 4 ID : 264330610131
Status : Answered
Chosen Option : 3

Q.11 If $A : B = 3 : 4$ and $B : C = 6 : 5$, then $A : B : C$ is:

- Ans**
- 1. 9 : 12 : 20
 - 2. 9 : 10 : 20
 - 3. 9 : 10 : 12
 - 4. 9 : 12 : 10

Question ID : 264330153872
Option 1 ID : 264330602951
Option 2 ID : 264330602952
Option 3 ID : 264330602953
Option 4 ID : 264330602954
Status : Answered
Chosen Option : 4

Q.12 5 pipes are required to fill a tank in 1 hour and 40 minutes. How long (in minutes) will it take to fill the same tank if 4 pipes of the same type are used?

- Ans
- 1. 115
 - 2. 150
 - 3. 125
 - 4. 140

Question ID : 264330153772
Option 1 ID : 264330602552
Option 2 ID : 264330602554
Option 3 ID : 264330602553
Option 4 ID : 264330602551
Status : Answered
Chosen Option : 3

Q.13 The mean of 23 observations is 36. If the mean of the first 12 observations is 32 and that of the last 12 observations is 39, find the 12th observation.

- Ans
- 1. 26
 - 2. 23
 - 3. 24
 - 4. 25

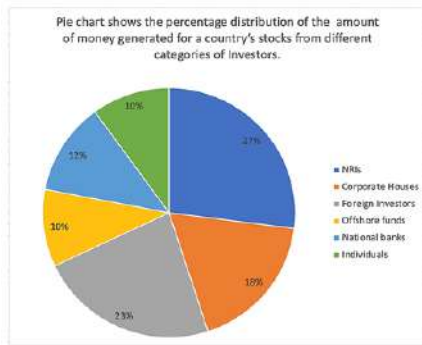
Question ID : 264330156096
Option 1 ID : 264330611785
Option 2 ID : 264330611783
Option 3 ID : 264330611786
Option 4 ID : 264330611784
Status : Answered
Chosen Option : 3

Q.14 By investing ₹12,000 in a scheme, R gets ₹15,500 back in return. What is his percentage of profit?

- Ans
- 1. 27.19%
 - 2. 29.17%
 - 3. 17.92%
 - 4. 19.17%

Question ID : 264330160010
Option 1 ID : 264330627388
Option 2 ID : 264330627387
Option 3 ID : 264330627390
Option 4 ID : 264330627389
Status : Answered
Chosen Option : 2

Q.15 The following Pie chart shows the amount of money generated for a country's stocks from different categories of Investors.



If the total investment other than by NRIs, foreign investors and corporate houses is ₹456 crore, then the investment by National banks and offshore funds (in crore ₹) will be:

- Ans**
- 1. 231.5
 - 2. 331.5
 - 3. 213.5
 - 4. 313.5

Question ID : 264330153783

Option 1 ID : 264330602597

Option 2 ID : 264330602595

Option 3 ID : 264330602598

Option 4 ID : 264330602596

Status : Answered

Chosen Option : 4

Q.16 A man rows to a place at a distance of 72 km and comes back in 36 hours. He finds that he can row 12 km with the stream in the same time as 4 km against the stream. The speed (in km/h, rounded off to 2 decimal places) of the stream is:

- Ans**
- 1. 3.75
 - 2. 2.45
 - 3. 2.67
 - 4. 2.33

Question ID : 264330153777

Option 1 ID : 264330602573

Option 2 ID : 264330602572

Option 3 ID : 264330602571

Option 4 ID : 264330602574

Status : Answered

Chosen Option : 3

Q.17 A milk vendor mixes water with milk and by selling the mixture at the cost price he gains $16\frac{1}{4}\%$. Find the ratio of milk to water in the mixture.

- Ans**
- 1. 7 : 40
 - 2. 80 : 13
 - 3. 13 : 80
 - 4. 40 : 7

Question ID : 264330153836

Option 1 ID : 264330602810

Option 2 ID : 264330602808

Option 3 ID : 264330602809

Option 4 ID : 264330602807

Status : Answered

Chosen Option : 2

Q.18 If the length of the longest diagonal of a cubical box is $\sqrt{300}$ cm, find its volume.

- Ans**
- 1. 10000 cm³
 - 2. 400 cm³
 - 3. 100 cm³
 - 4. 1000 cm³

Question ID : 264330156084

Option 1 ID : 264330611737

Option 2 ID : 264330611738

Option 3 ID : 264330611736

Option 4 ID : 264330611735

Status : Answered

Chosen Option : 4

Q.19 A, B and C can complete a work in 10, 15 and 25 days, respectively. The time taken by A, B and C together to do the work is:

- Ans**
- 1. $3\frac{16}{31}$ days
 - 2. $4\frac{26}{31}$ days
 - 3. $3\frac{11}{31}$ days
 - 4. $4\frac{27}{31}$ days

Question ID : 264330156531

Option 1 ID : 264330613513

Option 2 ID : 264330613511

Option 3 ID : 264330613512

Option 4 ID : 264330613514

Status : Answered

Chosen Option : 2

Q.20 A person jogged daily as per the given table:

Day	Monday	Tuesday	Wednesday	Thursday	Friday	Saturday	Sunday
Distance jogged (in kms)	4.5	3.5	2.5	3.0	2.0	4.0	1.5

What is the mean distance jogged by the person in a week?

- Ans**
- 1. 2
 - 2. 3.5
 - 3. 2.5
 - 4. 3

Question ID : 264330154097

Option 1 ID : 264330603852

Option 2 ID : 264330603851

Option 3 ID : 264330603854

Option 4 ID : 264330603853

Status : Answered

Chosen Option : 4

Q.1 Read the given statements and conclusions carefully. You have to take the given statements to be true even if they seem to be at variance from commonly known facts. You have to decide which conclusion/s logically follow/s from the given statements.

Statements: All dogs are cats. Some cats are hens. All hens are pink.

Conclusion I: Some dogs are cats.

Conclusion II: Some cats are pink.

- Ans**
- 1. Neither conclusion (I) nor (II) is follow.
 - 2. Both conclusions (I) and (II) are follow.
 - 3. Only conclusion (II) is follow.
 - 4. Only conclusion (I) is follow.

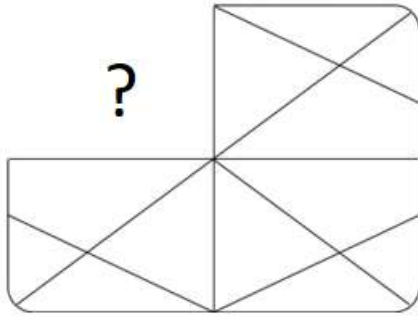
Question ID : 264330155923
Option 1 ID : 264330611097
Option 2 ID : 264330611098
Option 3 ID : 264330611096
Option 4 ID : 264330611095
Status : Answered
Chosen Option : 2

Q.2 5 is related to 24 following a certain logic. Following the same logic, 9 is related to 80. To which of the following is 14 related to, following the same logic?

- Ans**
- 1. 197
 - 2. 195
 - 3. 196
 - 4. 198

Question ID : 264330151585
Option 1 ID : 264330593969
Option 2 ID : 264330593967
Option 3 ID : 264330593968
Option 4 ID : 264330593970
Status : Answered
Chosen Option : 2

Q.3 Identify the figure that completes the pattern (rotation is NOT allowed).



Ans

- ✗ 1.
- ✗ 2.
- ✗ 3.
- ✓ 4.

Question ID : 264330154521

Option 1 ID : 264330605549

Option 2 ID : 264330605548

Option 3 ID : 264330605547

Option 4 ID : 264330605550

Status : Answered

Chosen Option : 4

Q.4 What should come in place of '?' in the given series?

14 47 146 443 1334 ?

- ✓ 1. 4007
- ✗ 2. 4171
- ✗ 3. 4078
- ✗ 4. 4001

Question ID : 264330151489

Option 1 ID : 264330593584

Option 2 ID : 264330593586

Option 3 ID : 264330593585

Option 4 ID : 264330593583

Status : Answered

Chosen Option : 1

Q.5 Select the combination of letters that when sequentially placed in the blanks of the given series, will complete the series.

_ TU _ T _ TT _ _ TU

- Ans**
- 1. UTUTU
 - 2. TTUUT
 - 3. UUTUU
 - 4. TUTUU

Question ID : 264330151647

Option 1 ID : 264330594216

Option 2 ID : 264330594218

Option 3 ID : 264330594215

Option 4 ID : 264330594217

Status : Answered

Chosen Option : 2

Q.6 Shagun, Pragya, Yati, Lovey, Savi and Frooti are sitting around a circular table facing the centre. Shagun sits 2nd to the left of Pragya. Yati sits 2nd to the left of Shagun. Lovey sits 3rd to the left of Yati. Savi sits 2nd to the left of Lovey. Who sits 3rd to the left of Shagun?

- Ans**
- 1. Pragya
 - 2. Lovey
 - 3. Savi
 - 4. Frooti

Question ID : 264330155653

Option 1 ID : 264330610017

Option 2 ID : 264330610016

Option 3 ID : 264330610018

Option 4 ID : 264330610015

Status : Answered

Chosen Option : 4

Q.7 If 15th Feb 2010 is Monday, then what will be the day of the week on 7th July 2011?

- Ans**
- 1. Saturday
 - 2. Monday
 - 3. Wednesday
 - 4. Thursday

Question ID : 264330154333

Option 1 ID : 264330604797

Option 2 ID : 264330604796

Option 3 ID : 264330604798

Option 4 ID : 264330604795

Status : Answered

Chosen Option : 4

Q.8 In a certain code language, 'ARC' is coded as '1-18-3' and 'BOY' is coded as '2-15-25'. What is the code for 'FAD' in the given code language?

- Ans**
- 1. 7-2-5
 - 2. 6-1-4
 - 3. 5-2-6
 - 4. 6-2-4

Question ID : 264330155817

Option 1 ID : 264330610673

Option 2 ID : 264330610672

Option 3 ID : 264330610671

Option 4 ID : 264330610674

Status : Answered

Chosen Option : 2

Q.9 What should come in place of ? in the given series based on the English alphabetical order?

HVP, JZO, LDN, NHM, ?

- Ans**
- 1. PLL
 - 2. NLN
 - 3. MLM
 - 4. OLL

Question ID : 264330155799

Option 1 ID : 264330610600

Option 2 ID : 264330610601

Option 3 ID : 264330610599

Option 4 ID : 264330610602

Status : Answered

Chosen Option : 1

Q.10 Select the set in which the numbers are related in the same way as are the numbers of the following sets.

(NOTE: Operations should be performed on the whole numbers, without breaking down the numbers into its constituent digits. E.g. 13 – Operations on 13 such as adding / subtracting / multiplying etc. to 13 can be performed.

Breaking down 13 into 1 and 3 and then performing mathematical operations on 1 and 3 is not allowed)

(2, 8, 32)

(5, 7, 70)

- Ans**
- 1. 7, 12, 84
 - 2. 3, 5, 15
 - 3. 6, 11, 56
 - 4. 4, 12, 96

Question ID : 264330151616

Option 1 ID : 264330594094

Option 2 ID : 264330594091

Option 3 ID : 264330594093

Option 4 ID : 264330594092

Status : Answered

Chosen Option : 4

Q.11 In a certain code language, 'NEAR' is coded as 4968 and 'REAP' is coded as 9865. What is the code for 'P' in the given code language?

- Ans**
- 1. 9
 - 2. 8
 - 3. 5
 - 4. 6

Question ID : 264330155870
Option 1 ID : 264330610883
Option 2 ID : 264330610884
Option 3 ID : 264330610886
Option 4 ID : 264330610885
Status : Answered
Chosen Option : 3

Q.12 What will come in place of '?' in the following equation, if '+' and '-' are interchanged and '×' and '÷' are interchanged?

$$10 + 6 - 5 \times 5 \div 3 = ?$$

- Ans**
- 1. 7
 - 2. 8
 - 3. 5
 - 4. 4

Question ID : 264330154664
Option 1 ID : 264330606121
Option 2 ID : 264330606122
Option 3 ID : 264330606120
Option 4 ID : 264330606119
Status : Answered
Chosen Option : 1

Q.13 EH 11 is related to CF 16 in a certain way. In the same way, JV 15 is related to HT 20. To which of the following is FN 13 related to following the same logic?

- Ans**
- 1. DK 19
 - 2. CL 18
 - 3. EM 17
 - 4. DL 18

Question ID : 264330151659
Option 1 ID : 264330594264
Option 2 ID : 264330594263
Option 3 ID : 264330594265
Option 4 ID : 264330594266
Status : Answered
Chosen Option : 4

Q.14 Find out the correct alternative that when filled in the blanks in the same sequence will make the series logically complete.

G_KPN_RPUXY_BE_PL_MP

- Ans**
- 1. QJLDP
 - 2. JPFLC
 - 3. JQPFL
 - 4. QFDPA

Question ID : 264330154728

Option 1 ID : 264330606376

Option 2 ID : 264330606377

Option 3 ID : 264330606375

Option 4 ID : 264330606378

Status : Answered

Chosen Option : 3

Q.15 What should come in place of '?' in the given series?

7 33 137 553 2217 ?

- Ans**
- 1. 8873
 - 2. 8723
 - 3. 8931
 - 4. 8827

Question ID : 264330151457

Option 1 ID : 264330593457

Option 2 ID : 264330593455

Option 3 ID : 264330593458

Option 4 ID : 264330593456

Status : Answered

Chosen Option : 1

Q.16 Read the given statements and conclusions carefully. You have to take the given statements to be true even if they seem to be at variance from commonly known facts. You have to decide which conclusion/s logically follow/s from the given statements.

Statements: All clowns are bottles. Some bottles are steel. All steel are keys.

Conclusion I: Some clowns are bottles.

Conclusion II: All steel are bottles.

- Ans**
- 1. Both conclusions (I) and (II) are follow.
 - 2. Only conclusion (I) is follow.
 - 3. Only conclusion (II) is follow.
 - 4. Neither conclusion (I) nor (II) is follow.

Question ID : 264330155905

Option 1 ID : 264330611026

Option 2 ID : 264330611023

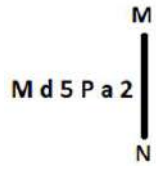
Option 3 ID : 264330611024

Option 4 ID : 264330611025

Status : Answered

Chosen Option : 2

Q.17 Select the correct mirror image of the given figure when the mirror is placed at MN as shown below.



- Ans**
- 1. a 2 5 P b M
 - 2. 2 5 P a 2 b M
 - 3. M q 5 P a 2
 - 4. M d 2 P a 2

Question ID : 264330151523
 Option 1 ID : 264330593722
 Option 2 ID : 264330593719
 Option 3 ID : 264330593720
 Option 4 ID : 264330593721
 Status : Answered
 Chosen Option : 2

Q.18 Which figure should replace the question mark (?) if the following figure series were to be continued?

S	4	S	=	
= X 4 A D S 4 V = X A S				?
D A X = A X V 4				

Ans

✗ 1.

S		
A 4 =		
X V		

✗ 2.

S		
= A 4		
X V		

✓ 3.

S		
= 6 4		
X V		

✗ 4.

S		
= 6 4		
A X		

Question ID : 264330154752
 Option 1 ID : 264330606473
 Option 2 ID : 264330606474
 Option 3 ID : 264330606471
 Option 4 ID : 264330606472
 Status : Answered
 Chosen Option : 3

Q.19 What should come in place of '?' in the given series?

12 18 30 54 102 ?

- Ans
- ✗ 1. 204
 - ✓ 2. 198
 - ✗ 3. 187
 - ✗ 4. 190

Question ID : 264330151452
 Option 1 ID : 264330593438
 Option 2 ID : 264330593437
 Option 3 ID : 264330593435
 Option 4 ID : 264330593436
 Status : Answered
 Chosen Option : 2

Q.20 What will come in the place of '?' in the following equation, if '+' and '-' are interchanged and '×' and '÷' are interchanged?
 $216 \times 36 - 6 + 17 + 39 = ?$

- Ans** 1. 69
 2. 89
 3. 79
 4. 59

Question ID : 264330155678
Option 1 ID : 264330610117
Option 2 ID : 264330610115
Option 3 ID : 264330610116
Option 4 ID : 264330610118
Status : Answered
Chosen Option : 1

Section : General Awareness

Q.1 Who propounded the concept of 'Rule of Law'?

- Ans** 1. AV Dicey
 2. CK Daphtary
 3. Austin
 4. AK Sen

Question ID : 264330159590
Option 1 ID : 264330625719
Option 2 ID : 264330625721
Option 3 ID : 264330625722
Option 4 ID : 264330625720
Status : Answered
Chosen Option : 1

Q.2 In which state is Vijay Stambh situated?

- Ans** 1. Rajasthan
 2. Punjab
 3. Uttar Pradesh
 4. Gujarat

Question ID : 264330160771
Option 1 ID : 264330630415
Option 2 ID : 264330630418
Option 3 ID : 264330630417
Option 4 ID : 264330630416
Status : Answered
Chosen Option : 1

Q.3 Which state passed a bill for the protection of advocates and became the first state to do so?

- Ans 1. Punjab
 2. Rajasthan
 3. Haryana
 4. Himachal Pradesh

Question ID : 264330158337
Option 1 ID : 264330620708
Option 2 ID : 264330620710
Option 3 ID : 264330620709
Option 4 ID : 264330620707
Status : Answered
Chosen Option : 3

Q.4 Chaoite, Buckminsterfullerene and Graphene are related to which element?

- Ans 1. Arsenic
 2. Carbon
 3. Sulphur
 4. Bromine

Question ID : 264330161059
Option 1 ID : 264330631569
Option 2 ID : 264330631567
Option 3 ID : 264330631568
Option 4 ID : 264330631570
Status : Answered
Chosen Option : 2

Q.5 Who is credited with the establishment of Servants of India Society?

- Ans 1. Lala Lajpat Rai
 2. Gopal Krishna Gokhale
 3. MG Ranade
 4. CR Das

Question ID : 264330162331
Option 1 ID : 264330636653
Option 2 ID : 264330636654
Option 3 ID : 264330636651
Option 4 ID : 264330636652
Status : Answered
Chosen Option : 2

Q.6 The value of all final goods and services produced within the country during one year is known as _____.

- Ans 1. gross national product
 2. net national product
 3. gross domestic product
 4. net domestic product

Question ID : 264330161457
Option 1 ID : 264330633157
Option 2 ID : 264330633158
Option 3 ID : 264330633156
Option 4 ID : 264330633155
Status : Answered
Chosen Option : 3

Q.7 Who was the first speaker of the Lok Sabha?

- Ans
- 1. NS Reddy
 - 2. GV Mavalankar
 - 3. Ananthasayanam Ayyangar
 - 4. Mira Kumar

Question ID : 264330159921
Option 1 ID : 264330627034
Option 2 ID : 264330627031
Option 3 ID : 264330627032
Option 4 ID : 264330627033
Status : Answered
Chosen Option : 2

Q.8 'The Story of My Experiments with Truth' is an autobiography of _____.

- Ans
- 1. Dr. Rajendra Prasad
 - 2. Mahatma Gandhi
 - 3. Vivekanand
 - 4. Jawaharlal Nehru

Question ID : 264330155489
Option 1 ID : 264330609362
Option 2 ID : 264330609359
Option 3 ID : 264330609361
Option 4 ID : 264330609360
Status : Answered
Chosen Option : 2

Q.9 Who was the music director of the famous film 'Sholay' released in 1975?

- Ans
- 1. Madan Mohan
 - 2. Jatin - Lalit
 - 3. Nadeem - Shravan
 - 4. RD Burman

Question ID : 264330155517
Option 1 ID : 264330609474
Option 2 ID : 264330609473
Option 3 ID : 264330609472
Option 4 ID : 264330609471
Status : Answered
Chosen Option : 4

Q.10 The technique of classical dancing was codified by _____ in about the 5th century B.C.

- Ans 1. Sudraka
 2. Bharata
 3. Chanakya
 4. Kalhana

Question ID : 264330159046
Option 1 ID : 264330623543
Option 2 ID : 264330623545
Option 3 ID : 264330623544
Option 4 ID : 264330623546
Status : Answered
Chosen Option : 2

Q.11 Who among the following is the author of the novel 'Animal Farm'?

- Ans 1. Thomas Hardy
 2. George Orwell
 3. Roald Dahl
 4. Charles Dickens

Question ID : 264330161759
Option 1 ID : 264330634364
Option 2 ID : 264330634363
Option 3 ID : 264330634365
Option 4 ID : 264330634366
Status : Not Answered
Chosen Option : --

Q.12 Who among the following is credited with starting a Fusion Dance form called 'Hi-Dance'?

- Ans 1. Shashadhar Acharya
 2. Uday Shankar
 3. Kartik Ram
 4. Mani Damodara

Question ID : 264330155477
Option 1 ID : 264330609311
Option 2 ID : 264330609313
Option 3 ID : 264330609314
Option 4 ID : 264330609312
Status : Answered
Chosen Option : 2

Q.13 According to the Census of India 2011, which of the following states has the lowest population?

- Ans 1. Sikkim
 2. Goa
 3. Manipur
 4. Mizoram

Question ID : 264330160157
Option 1 ID : 264330627970
Option 2 ID : 264330627969
Option 3 ID : 264330627968
Option 4 ID : 264330627967
Status : Answered
Chosen Option : 1

Q.14 The Lambadi dance is a folk dance form of the _____ tribe and originated in Andhra Pradesh.

- Ans 1. Sugali
 2. Banjara
 3. Nakkala
 4. Dabba Yerukula

Question ID : 264330160798
Option 1 ID : 264330630525
Option 2 ID : 264330630523
Option 3 ID : 264330630526
Option 4 ID : 264330630524
Status : Not Answered
Chosen Option : --

Q.15 In which of the following years was the Child Marriage Restraint Act passed?

- Ans 1. 1856
 2. 1947
 3. 1878
 4. 1929

Question ID : 264330162349
Option 1 ID : 264330636726
Option 2 ID : 264330636725
Option 3 ID : 264330636723
Option 4 ID : 264330636724
Status : Answered
Chosen Option : 4

Q.16 What is the main reason behind the substantial rainfall during summer on the western coasts of India?

- Ans 1. Western Ghats
 2. Eastern winds
 3. Indus River
 4. Eastern Ghats

Question ID : 264330161305
Option 1 ID : 264330632549
Option 2 ID : 264330632547
Option 3 ID : 264330632548
Option 4 ID : 264330632550
Status : Answered
Chosen Option : 1

Q.17 The second edition of Khelo India Youth Games, 2019 was organised in which city?

- Ans 1. Pune
 2. Guwahati
 3. New Delhi
 4. Mumbai

Question ID : 264330158219
Option 1 ID : 264330620236
Option 2 ID : 264330620237
Option 3 ID : 264330620235
Option 4 ID : 264330620238
Status : Answered
Chosen Option : 2

Q.18 ACF conferred Grandmaster _____ with Player of the Year award, who is only the sixth Indian to break the 2700 Elo-rating mark and the youngest Grandmaster from the country to be rated above 2700.

- Ans 1. NR Vignesh
 2. Aadit Khan
 3. Koshy Varugeese
 4. D Gukesh

Question ID : 264330161439
Option 1 ID : 264330633085
Option 2 ID : 264330633084
Option 3 ID : 264330633083
Option 4 ID : 264330633086
Status : Answered
Chosen Option : 3

Q.19 Which condition causes bone pain, poor growth, and soft, weak bones that can lead to bone deformities?

- Ans 1. Rickets
 2. Cerebral Palsy
 3. Pertussis
 4. Asplenia

Question ID : 264330161079
Option 1 ID : 264330631647
Option 2 ID : 264330631649
Option 3 ID : 264330631648
Option 4 ID : 264330631650
Status : Answered
Chosen Option : 1

Q.20 In which Indian musician's name did the state of Massachusetts in the USA declare April 20th in 1984 as a day in his name?

- Ans
- 1. Brij Narayan
 - 2. Ali Akbar Khan
 - 3. Rajeev Taranath
 - 4. Amjad Ali Khan

Question ID : 264330161909
Option 1 ID : 264330634966
Option 2 ID : 264330634965
Option 3 ID : 264330634963
Option 4 ID : 264330634964
Status : Not Answered
Chosen Option : --

Q.21 Which of the following is an advantage of microfinance institutions in India?

- Ans
- 1. Limited impact on poverty reduction
 - 2. Increased reliance on informal lending sources
 - 3. Minimal support for women entrepreneurs
 - 4. Enhanced financial inclusion

Question ID : 264330157291
Option 1 ID : 264330616528
Option 2 ID : 264330616527
Option 3 ID : 264330616530
Option 4 ID : 264330616529
Status : Answered
Chosen Option : 4

Q.22 Which of the following statements about Mahatma Gandhi is INCORRECT?

- Ans
- 1. Mahatma Gandhi was born in 1869 in Porbandar.
 - 2. In 1942, he launched the Quit India Movement.
 - 3. He led the Champaran Satyagraha in 1910.
 - 4. He led the Dandi Salt March in 1930.

Question ID : 264330160826
Option 1 ID : 264330630635
Option 2 ID : 264330630638
Option 3 ID : 264330630637
Option 4 ID : 264330630636
Status : Answered
Chosen Option : 3

Q.23 Which university won the first place in the 3rd Khelo India University Games?

- Ans
- 1. University of Mumbai
 - 2. Panjab University
 - 3. Shivaji University
 - 4. University of Madras

Question ID : 264330158230
Option 1 ID : 264330620282
Option 2 ID : 264330620279
Option 3 ID : 264330620280
Option 4 ID : 264330620281
Status : Answered
Chosen Option : 2

Q.24 In which of the following states of India is the maximum extent of alluvial soil found?

- Ans** 1. Telangana
 2. Uttar Pradesh
 3. Karnataka
 4. Maharashtra

Question ID : 264330161528
Option 1 ID : 264330633439
Option 2 ID : 264330633442
Option 3 ID : 264330633440
Option 4 ID : 264330633441
Status : Answered
Chosen Option : 2

Q.25 The _____ port was developed after independence to ease the volume of trade on the Mumbai port.

- Ans** 1. Kandla
 2. Kolkata
 3. Chennai
 4. Visakhapatnam

Question ID : 264330161513
Option 1 ID : 264330633382
Option 2 ID : 264330633381
Option 3 ID : 264330633380
Option 4 ID : 264330633379
Status : Answered
Chosen Option : 1

Section : English Language and Comprehension

Q.1 Select the INCORRECTLY spelt word.

- Ans** 1. Curiosity
 2. Vehemence
 3. Superficial
 4. Synagogue

Question ID : 264330153220
Option 1 ID : 264330600442
Option 2 ID : 264330600439
Option 3 ID : 264330600441
Option 4 ID : 264330600440
Status : Answered
Chosen Option : 1

Q.2 Select the most appropriate meaning of the underlined idiom in the following sentence.

Riddhi believes in wearing her heart on her sleeve. That is why she has so many friends.

- Ans
- 1. To criticise everybody
 - 2. To wear a badge of honour
 - 3. To openly and freely express one's emotions
 - 4. To talk aloud

Question ID : 264330153052
Option 1 ID : 264330599778
Option 2 ID : 264330599776
Option 3 ID : 264330599777
Option 4 ID : 264330599775
Status : Answered
Chosen Option : 3

Q.3 Select the most appropriate meaning of the given idiom.
To cross swords

- Ans
- 1. To kill
 - 2. To arrange
 - 3. To fight
 - 4. To defend

Question ID : 264330156174
Option 1 ID : 264330612095
Option 2 ID : 264330612098
Option 3 ID : 264330612097
Option 4 ID : 264330612096
Status : Answered
Chosen Option : 3

Q.4 Select the most appropriate option to fill in the blank.
Virtual worlds are recently new phenomena in that they _____ people to meet and socially interact with others in a variety of online environments.

- Ans
- 1. forbid
 - 2. bring
 - 3. choose
 - 4. enable

Question ID : 264330151904
Option 1 ID : 264330595231
Option 2 ID : 264330595232
Option 3 ID : 264330595234
Option 4 ID : 264330595233
Status : Answered
Chosen Option : 2

Q.5 The following sentence has been split into four segments. Identify the segment that contains an error.

I have seen / a movie / on schooling / yesterday.

Ans ✓ 1. I have seen

✗ 2. on schooling

✗ 3. yesterday

✗ 4. a movie

Question ID : 264330155322

Option 1 ID : 264330608727

Option 2 ID : 264330608729

Option 3 ID : 264330608730

Option 4 ID : 264330608728

Status : Answered

Chosen Option : 1

Q.6 Select the most appropriate ANTONYM of the given word.

Cheap

Ans ✓ 1. Expensive

✗ 2. Ignorant

✗ 3. Old

✗ 4. Untangle

Question ID : 264330152717

Option 1 ID : 264330598468

Option 2 ID : 264330598467

Option 3 ID : 264330598470

Option 4 ID : 264330598469

Status : Answered

Chosen Option : 1

Q.7 Select the most appropriate option that can substitute the underlined segment in the given sentence.

Kavya invited all her friends, isn't it?

Ans ✓ 1. didn't she?

✗ 2. did she?

✗ 3. don't she?

✗ 4. isn't she?

Question ID : 264330152730

Option 1 ID : 264330598521

Option 2 ID : 264330598520

Option 3 ID : 264330598522

Option 4 ID : 264330598519

Status : Answered

Chosen Option : 1

Q.8 Select the most appropriate idiom to fill in the blank.
The deal was _____ for three months.

- Ans
- 1. cut no ice
 - 2. broken the ice
 - 3. tipped of the iceberg
 - 4. put on ice

Question ID : 264330153102
Option 1 ID : 264330599971
Option 2 ID : 264330599972
Option 3 ID : 264330599973
Option 4 ID : 264330599974
Status : Answered
Chosen Option : 4

Q.9 The given sentence contains an error. Select the option that correctly rectifies the error.
This is the eldest standing structure of Chola architecture in India.

- Ans
- 1. This is the more older standing structure of Chola architecture in India.
 - 2. This is the most old standing structure of Chola architecture in India.
 - 3. This is the more elder standing structure of Chola architecture in India.
 - 4. This is the oldest standing structure of Chola architecture in India.

Question ID : 264330152611
Option 1 ID : 264330598047
Option 2 ID : 264330598048
Option 3 ID : 264330598050
Option 4 ID : 264330598049
Status : Answered
Chosen Option : 4

Q.10 The following sentence has been split into four segments. Identify the segment that contains a grammatical error.

They decided to / travel in train / instead of driving / to New Delhi.

- Ans
- 1. They decided to
 - 2. travel in train
 - 3. to New Delhi
 - 4. instead of driving

Question ID : 264330155429
Option 1 ID : 264330609123
Option 2 ID : 264330609124
Option 3 ID : 264330609126
Option 4 ID : 264330609125
Status : Answered
Chosen Option : 2

Q.11 Select the most appropriate ANTONYM of the given word.
Strengthen

- Ans** 1. Debilitate
 2. Strain
 3. Fortify
 4. Ascend

Question ID : 264330151875
Option 1 ID : 264330595120
Option 2 ID : 264330595122
Option 3 ID : 264330595119
Option 4 ID : 264330595121
Status : Answered
Chosen Option : 1

Q.12 Select the most appropriate ANTONYM of the given word.
Fame

- Ans** 1. Name
 2. Shame
 3. Scandal
 4. Stingy

Question ID : 264330152592
Option 1 ID : 264330597971
Option 2 ID : 264330597974
Option 3 ID : 264330597972
Option 4 ID : 264330597973
Status : Answered
Chosen Option : 2

Q.13 Select the sentence that has NO spelling errors.

- Ans** 1. My new phone has a high-resolution screen and powerful processor, which makes it perfect for streaming videos and playing games.
 2. My new phone has a high-resollution screen and a powerfull procesor, which makes it perfect for streaming videos and playing games.
 3. My new phone has a high-resolution screen and a powerful processor, which makes it perfect for streaming videos and playing games.
 4. My new phone has a high-resolution screan and powerfull procesor, which makes it perfect for streaming videos and playing games.

Question ID : 264330152647
Option 1 ID : 264330598191
Option 2 ID : 264330598193
Option 3 ID : 264330598192
Option 4 ID : 264330598194
Status : Answered
Chosen Option : 3

Q.14 Identify the **INCORRECTLY** spelt word in the following sentence.
Being a doktor, my sister Meera is prepared for an emergency usually.

- Ans
- 1. prepared
 - 2. doktor
 - 3. usually
 - 4. emergency

Question ID : 264330152599
Option 1 ID : 264330598000
Option 2 ID : 264330597999
Option 3 ID : 264330598002
Option 4 ID : 264330598001
Status : Answered
Chosen Option : 2

Q.15 Select the option that can be used as a one-word substitute for the underlined group of words.
I suppose dancing that well would require a lot of actual application.

- Ans
- 1. prevention
 - 2. perseverance
 - 3. practice
 - 4. perception

Question ID : 264330153493
Option 1 ID : 264330601487
Option 2 ID : 264330601490
Option 3 ID : 264330601489
Option 4 ID : 264330601488
Status : Answered
Chosen Option : 3

Q.16 The following sentence has been split into four segments. Identify the segment that contains a grammatical error.

A music / is a great way / to express / your emotions.

- Ans
- 1. to express
 - 2. is a great way
 - 3. A music
 - 4. your emotions

Question ID : 264330155414
Option 1 ID : 264330609065
Option 2 ID : 264330609064
Option 3 ID : 264330609063
Option 4 ID : 264330609066
Status : Answered
Chosen Option : 3

Q.17 Select the most appropriate idiom to fill in the blank.
You are an intellectual with a professional degree; you can do wonders as _____.

- Ans
- 1. you are playing with fire
 - 2. you can say it again
 - 3. your mileage may vary
 - 4. the world is your oyster

Question ID : 264330153560
Option 1 ID : 264330601742
Option 2 ID : 264330601739
Option 3 ID : 264330601741
Option 4 ID : 264330601740
Status : Answered
Chosen Option : 4

Q.18 Select the most appropriate option that can substitute the underlined segment in the given sentence.
Rashmi works at the hospital, don't she?

- Ans
- 1. does she?
 - 2. has she?
 - 3. doesn't she?
 - 4. do she?

Question ID : 264330153595
Option 1 ID : 264330601868
Option 2 ID : 264330601867
Option 3 ID : 264330601870
Option 4 ID : 264330601869
Status : Answered
Chosen Option : 3

Q.19 Parts of the following sentence have been given as options. Select the option that contains an error.
Radha will have learnt cooking by the time she will have married.

- Ans
- 1. learnt cooking
 - 2. by the time
 - 3. she will have married
 - 4. Radha will have

Question ID : 264330152820
Option 1 ID : 264330598872
Option 2 ID : 264330598873
Option 3 ID : 264330598874
Option 4 ID : 264330598871
Status : Answered
Chosen Option : 3

Q.20 Select the option that can be used as a one-word substitute for the given group of words.

Fear of closed spaces

- Ans** 1. Xenophobia
 2. Claustrophobia
 3. Hydrophobia
 4. Zoophobia

Question ID : 264330151867

Option 1 ID : 264330595087

Option 2 ID : 264330595090

Option 3 ID : 264330595089

Option 4 ID : 264330595088

Status : Answered

Chosen Option : 2

Comprehension:

In the following passage, some words have been deleted. Read the passage carefully and select the most appropriate option to fill in each blank.

A cashless India is the first step towards making the dream of digital India a reality.

Government is trying to (1)_____ a cashless environment in the country.

Demonetisation appears to be a stepping (2)_____ in that direction. To help facilitate this, government even (3)_____ its own app 'BHIM' built for the same purpose. The

(4)_____ of conducting online financial transactions is probably the biggest motivator to go digital. You will no longer need to carry wads of cash, plastic cards or even queue up for ATM withdrawals. It's also safer and easier spending option when you are travelling. Making transactions digitally makes it easy to keep track of your finances. The (5)_____ are enormous for everyone if you leave out the low-income group, which will face a huge challenge. For the rest of the country, it is constructive and simple. However, the convenience of net-banking, m-banking, card or mobile wallet transactions can make you spend more than your budget.

SubQuestion No : 21

Q.21 Select the most appropriate option to fill in blank No. 1.

- Ans** 1. preach
 2. determine
 3. precede
 4. create

Question ID : 264330152700

Option 1 ID : 264330598399

Option 2 ID : 264330598400

Option 3 ID : 264330598401

Option 4 ID : 264330598402

Status : Answered

Chosen Option : 4

Comprehension:

In the following passage, some words have been deleted. Read the passage carefully and select the most appropriate option to fill in each blank.

A cashless India is the first step towards making the dream of digital India a reality. Government is trying to (1)_____ a cashless environment in the country. Demonetisation appears to be a stepping (2)_____ in that direction. To help facilitate this, government even (3)_____ its own app 'BHIM' built for the same purpose. The (4)_____ of conducting online financial transactions is probably the biggest motivator to go digital. You will no longer need to carry wads of cash, plastic cards or even queue up for ATM withdrawals. It's also safer and easier spending option when you are travelling. Making transactions digitally makes it easy to keep track of your finances. The (5)_____ are enormous for everyone if you leave out the low-income group, which will face a huge challenge. For the rest of the country, it is constructive and simple. However, the convenience of net-banking, m-banking, card or mobile wallet transactions can make you spend more than your budget.

SubQuestion No : 22

Q.22 Select the most appropriate option to fill in blank No. 2.

- Ans 1. method
 2. matter
 3. stairs
 4. stone

Question ID : 264330152701

Option 1 ID : 264330598405

Option 2 ID : 264330598403

Option 3 ID : 264330598406

Option 4 ID : 264330598404

Status : Answered

Chosen Option : 1

Comprehension:

In the following passage, some words have been deleted. Read the passage carefully and select the most appropriate option to fill in each blank.

A cashless India is the first step towards making the dream of digital India a reality. Government is trying to (1)_____ a cashless environment in the country. Demonetisation appears to be a stepping (2)_____ in that direction. To help facilitate this, government even (3)_____ its own app 'BHIM' built for the same purpose. The (4)_____ of conducting online financial transactions is probably the biggest motivator to go digital. You will no longer need to carry wads of cash, plastic cards or even queue up for ATM withdrawals. It's also safer and easier spending option when you are travelling. Making transactions digitally makes it easy to keep track of your finances. The (5)_____ are enormous for everyone if you leave out the low-income group, which will face a huge challenge. For the rest of the country, it is constructive and simple. However, the convenience of net-banking, m-banking, card or mobile wallet transactions can make you spend more than your budget.

SubQuestion No : 23

Q.23 Select the most appropriate option to fill in blank No. 3.

- Ans 1. followed
 2. sensed
 3. launched
 4. submitted

Question ID : 264330152702

Option 1 ID : 264330598410

Option 2 ID : 264330598409

Option 3 ID : 264330598407

Option 4 ID : 264330598408

Status : Answered

Chosen Option : 3

Comprehension:

In the following passage, some words have been deleted. Read the passage carefully and select the most appropriate option to fill in each blank.

A cashless India is the first step towards making the dream of digital India a reality. Government is trying to (1)_____ a cashless environment in the country. Demonetisation appears to be a stepping (2)_____ in that direction. To help facilitate this, government even (3)_____ its own app 'BHIM' built for the same purpose. The (4)_____ of conducting online financial transactions is probably the biggest motivator to go digital. You will no longer need to carry wads of cash, plastic cards or even queue up for ATM withdrawals. It's also safer and easier spending option when you are travelling. Making transactions digitally makes it easy to keep track of your finances. The (5)_____ are enormous for everyone if you leave out the low-income group, which will face a huge challenge. For the rest of the country, it is constructive and simple. However, the convenience of net-banking, m-banking, card or mobile wallet transactions can make you spend more than your budget.

SubQuestion No : 24

Q.24 Select the most appropriate option to fill in blank No. 4.

- Ans 1. hassle
 2. ease
 3. agony
 4. delay

Question ID : 264330152703

Option 1 ID : 264330598412

Option 2 ID : 264330598414

Option 3 ID : 264330598411

Option 4 ID : 264330598413

Status : Answered

Chosen Option : 2

Comprehension:

In the following passage, some words have been deleted. Read the passage carefully and select the most appropriate option to fill in each blank.

A cashless India is the first step towards making the dream of digital India a reality. Government is trying to (1)_____ a cashless environment in the country. Demonetisation appears to be a stepping (2)_____ in that direction. To help facilitate this, government even (3)_____ its own app 'BHIM' built for the same purpose. The (4)_____ of conducting online financial transactions is probably the biggest motivator to go digital. You will no longer need to carry wads of cash, plastic cards or even queue up for ATM withdrawals. It's also safer and easier spending option when you are travelling. Making transactions digitally makes it easy to keep track of your finances. The (5)_____ are enormous for everyone if you leave out the low-income group, which will face a huge challenge. For the rest of the country, it is constructive and simple. However, the convenience of net-banking, m-banking, card or mobile wallet transactions can make you spend more than your budget.

SubQuestion No : 25

Q.25 Select the most appropriate option to fill in blank No. 5.

- Ans 1. attempts
 2. scenarios
 3. benefits
 4. severity

Question ID : 264330152704

Option 1 ID : 264330598417

Option 2 ID : 264330598415

Option 3 ID : 264330598416

Option 4 ID : 264330598418

Status : Answered

Chosen Option : 3

SSC MTS 2023 Tier 1 Sept 11 Shift 3 Question Paper with Answers

Roll Number	
Candidate Name	
Exam Date	11/09/2023
Exam Time	4:00 PM - 6:00 PM
Subject	MTS Non Tech Havaladar CBIC and CBN Examination 2023

Section : Numerical and Mathematical Ability

Q.1 A thief noticed a policeman at a distance of 500 m away from him. The thief starts running at a speed of 60 km/h and the policeman chased him running at a speed of 70 km/h. Find the time taken by the policeman to catch the thief (in minutes).

- Ans
- 1. 15
 - 2. 10
 - 3. 3
 - 4. 6

Question ID : 264330153852

Option 1 ID : 264330602874

Option 2 ID : 264330602871

Option 3 ID : 264330602873

Option 4 ID : 264330602872

Status : Answered

Chosen Option : 3

Q.2 If the income of T is 8 times his savings, then his expenditure is _____ times his savings.

- Ans
- 1. 6
 - 2. 7
 - 3. 8
 - 4. 5

Question ID : 264330153803

Option 1 ID : 264330602677

Option 2 ID : 264330602676

Option 3 ID : 264330602675

Option 4 ID : 264330602678

Status : Answered

Chosen Option : 2

Q.3 The average marks of 21 papers is 50. The average marks of the first 11 papers is 52 and that of the last 11 papers is 45. Find the marks of the 11th paper.

- Ans** 1. 17
 2. 14
 3. 20
 4. 15

Question ID : 264330153834
Option 1 ID : 264330602802
Option 2 ID : 264330602799
Option 3 ID : 264330602800
Option 4 ID : 264330602801
Status : Answered
Chosen Option : 1

Q.4 By selling a cycle for ₹5,800, a man gains 45%. What will be the cost price of the cycle?

- Ans** 1. ₹3,000
 2. ₹4,500
 3. ₹4,000
 4. ₹3,500

Question ID : 264330162068
Option 1 ID : 264330635600
Option 2 ID : 264330635602
Option 3 ID : 264330635599
Option 4 ID : 264330635601
Status : Answered
Chosen Option : 3

Q.5 Mayur and Aham enter into a partnership by making investments in the ratio 2 : 3. 10% of the total profit goes to charity. If Aham's share is ₹4,860, then what is the total profit (in ₹) earned?

- Ans** 1. 7,200
 2. 9,000
 3. 8,500
 4. 11,000

Question ID : 264330155743
Option 1 ID : 264330610378
Option 2 ID : 264330610376
Option 3 ID : 264330610377
Option 4 ID : 264330610375
Status : Answered
Chosen Option : 4

Q.6 A certain sum of money lent out at simple interest amounts to ₹12,600 in 2 years and ₹16,200 in 4 years. The rate per cent per annum is:

- Ans
- 1. 25 %
 - 2. $12\frac{6}{7}$ %
 - 3. $17\frac{1}{2}$ %
 - 4. 20 %

Question ID : 264330159036
Option 1 ID : 264330623505
Option 2 ID : 264330623506
Option 3 ID : 264330623504
Option 4 ID : 264330623503
Status : Answered
Chosen Option : 4

Q.7 Dev and Goyal together can do a piece of work in 14 days and Dev alone can do it in 27 days. In how many days can Goyal alone do it?

- Ans
- 1. $21\frac{1}{13}$
 - 2. $30\frac{1}{13}$
 - 3. $29\frac{1}{13}$
 - 4. $32\frac{1}{13}$

Question ID : 264330155755
Option 1 ID : 264330610423
Option 2 ID : 264330610425
Option 3 ID : 264330610424
Option 4 ID : 264330610426
Status : Answered
Chosen Option : 1

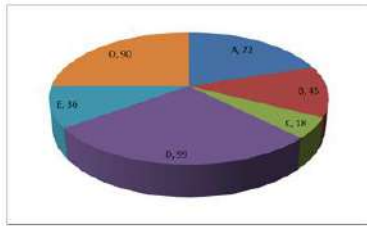
Q.8 A company buys raw materials for ₹10,000 and manufactures a product that costs an additional ₹5,000 in labour and overhead. The product is sold to a distributor for ₹25,000, who marks it up by 20% and sells it to a retailer. The retailer then marks it up by another 25% and sells it to the end customer. What is the overall percentage profit made by the company, distributor, and retailer combined?

- Ans
- 1. 100%
 - 2. 150%
 - 3. 125%
 - 4. 135%

Question ID : 264330156266
Option 1 ID : 264330612463
Option 2 ID : 264330612466
Option 3 ID : 264330612464
Option 4 ID : 264330612465
Status : Answered
Chosen Option : 2

Q.9 The pie diagram represents the export of different types of fabrics (in degree measure) from India during 2015.

Out of the total export, what is the percentage of fabric B?



- Ans**
- 1. 45%
 - 2. 25%
 - 3. 12.5%
 - 4. 18%

Question ID : 264330154065

Option 1 ID : 264330603723

Option 2 ID : 264330603724

Option 3 ID : 264330603725

Option 4 ID : 264330603726

Status : Answered

Chosen Option : 3

Q.10 Find the area (in cm^2) of the rhombus, lengths of whose diagonals are, respectively, 7.5 cm and 5.6 cm.

- Ans**
- 1. 21
 - 2. 28
 - 3. 27
 - 4. 30

Question ID : 264330153862

Option 1 ID : 264330602912

Option 2 ID : 264330602911

Option 3 ID : 264330602913

Option 4 ID : 264330602914

Status : Answered

Chosen Option : 2

Q.11 The average age of 25 students in a group is 14 years. When the teacher's age is included, the average increases by 1.5 years. What is the teacher's age (in years)?

- Ans**
- 1. 42
 - 2. 50
 - 3. 53
 - 4. 46

Question ID : 264330156466

Option 1 ID : 264330613254

Option 2 ID : 264330613251

Option 3 ID : 264330613253

Option 4 ID : 264330613252

Status : Answered

Chosen Option : 3

Q.12 If $a : b = 3 : 7$, then the ratio of $(5a + 7b) : (7a + 5b)$ is:

- Ans
- 1. $3 : 7$
 - 2. $7 : 11$
 - 3. $7 : 9$
 - 4. $8 : 7$

Question ID : 264330154081
Option 1 ID : 264330603788
Option 2 ID : 264330603787
Option 3 ID : 264330603790
Option 4 ID : 264330603789
Status : Answered
Chosen Option : 4

Q.13 Two-fifth of a journey is covered at a speed of 45 km/h, and the remaining distance is covered at the rate of 63 km/h. The average speed for the whole journey (in km/h, rounded off to the nearest integer) is:

- Ans
- 1. 60
 - 2. 58
 - 3. 54
 - 4. 55

Question ID : 264330156470
Option 1 ID : 264330613267
Option 2 ID : 264330613270
Option 3 ID : 264330613268
Option 4 ID : 264330613269
Status : Answered
Chosen Option : 1

Q.14 Some solid metallic right circular cones, each with diameter of the base 8 cm and height 6 cm are melted to form a solid sphere of radius 12 cm. Find the number of right circular cones which are melted.

- Ans
- 1. 60
 - 2. 66
 - 3. 72
 - 4. 70

Question ID : 264330156019
Option 1 ID : 264330611476
Option 2 ID : 264330611478
Option 3 ID : 264330611477
Option 4 ID : 264330611475
Status : Answered
Chosen Option : 3

Q.15 Radha, Prarima and Reena begin to jog around a circular path and they complete their revolutions in 50 seconds, 75 seconds and 100 seconds, respectively. After how much time (in minutes) will they meet together at the starting point for the first time?

- Ans**
- 1. 6
 - 2. 5
 - 3. 4
 - 4. 3

Question ID : 264330155686

Option 1 ID : 264330610150

Option 2 ID : 264330610149

Option 3 ID : 264330610148

Option 4 ID : 264330610147

Status : Answered

Chosen Option : 2

Q.16 A, B and C can complete a piece of work in 12 days, 24 days and 36 days, respectively. A starts working alone on the first day and then A is assisted by B on the second day and C on the third day, respectively. This pattern is repeated till the work gets completed. In how many days does the work will be over?

- Ans**
- 1. 9
 - 2. 10
 - 3. $9\frac{1}{2}$
 - 4. $8\frac{1}{2}$

Question ID : 264330156310

Option 1 ID : 264330612641

Option 2 ID : 264330612639

Option 3 ID : 264330612642

Option 4 ID : 264330612640

Status : Answered

Chosen Option : 4

Q.17 The table shows the annual expenditure of five families during the last 5 years. (In ₹ Thousands)

Year→ Family ↓	2017	2018	2019	2020	2021
F ₁	35	50	55	60	45
F ₂	45	35	60	55	40
F ₃	53	40	45	65	50
F ₄	40	30	35	50	45
F ₅	35	45	55	50	45

Which family had the highest expense throughout the years?

- Ans**
- 1. F₅
 - 2. F₄
 - 3. F₃
 - 4. F₁

Question ID : **264330154061**
Option 1 ID : **264330603708**
Option 2 ID : **264330603710**
Option 3 ID : **264330603709**
Option 4 ID : **264330603707**
Status : **Answered**
Chosen Option : **3**

Q.18 In how many years will ₹1,60,000 become ₹2,79,841 at a compound interest (Compounded annually) rate of 15% per annum?

- Ans**
- 1. 6
 - 2. 3
 - 3. 5
 - 4. 4

Question ID : **264330156189**
Option 1 ID : **264330612155**
Option 2 ID : **264330612158**
Option 3 ID : **264330612156**
Option 4 ID : **264330612157**
Status : **Answered**
Chosen Option : **4**

Q.19 Identify the single rational number that may replace the given expression.

$$[1^2 + 2^2 + 3^2 + 4^2] \times \frac{2}{3 \times 5} \div \left(\frac{1}{4}\right)^2$$

- Ans
- 1. 16
 - 2. 64
 - 3. $\frac{1}{64}$
 - 4. $\frac{1}{16}$

Question ID : 264330154115

Option 1 ID : 264330603925

Option 2 ID : 264330603923

Option 3 ID : 264330603924

Option 4 ID : 264330603926

Status : Answered

Chosen Option : 2

Q.20 Two trains A and B, 210 m and 150 m, respectively, in length, are running in the same direction on parallel lines. If the speed of A and B be 110 km/h and 128 km/h, respectively, then what will be the time (in seconds) taken by train B to cross train A?

- Ans
- 1. 72
 - 2. 74
 - 3. 71
 - 4. 70

Question ID : 264330156234

Option 1 ID : 264330612337

Option 2 ID : 264330612338

Option 3 ID : 264330612336

Option 4 ID : 264330612335

Status : Answered

Chosen Option : 2

Section : Reasoning Ability and Problem Solving

Q.1 Read the given statements and conclusions carefully. You have to take the given statements to be true even if they seem to be at variance from commonly known facts. You have to decide which conclusion/s logically follow/s from the given statements.

Statements: All trees are mobiles. Some mobiles are small. All small are ants.

Conclusion I: Some trees are mobiles.

Conclusion II: Some ants are small.

- Ans
- 1. Only conclusion (II) is follow.
 - 2. Neither conclusion (I) nor (II) is follow.
 - 3. Only conclusion (I) is follow.
 - 4. Both conclusions (I) and (II) are follow.

Question ID : 264330155894

Option 1 ID : 264330610980

Option 2 ID : 264330610981

Option 3 ID : 264330610979

Option 4 ID : 264330610982

Status : Answered

Chosen Option : 1

Q.2 If A means '-', E means '×', D means '+', G means '÷', then what will come in place of the question mark (?) in the following equation?

$$21 G 14 D 1 A 2 E 8 = ?$$

- Ans**
- 1. 11
 - 2. 25
 - 3. 17
 - 4. 19

Question ID : 264330154681

Option 1 ID : 264330606187

Option 2 ID : 264330606190

Option 3 ID : 264330606188

Option 4 ID : 264330606189

Status : Answered

Chosen Option : 4

Q.3 What will come in place of '?' in the following equation, if '+' and '×' are interchanged and '×' and '-' are interchanged?

$$10 + 2 - 6 \times 7 + 1 = ?$$

- Ans**
- 1. 24
 - 2. 19
 - 3. 18
 - 4. 15

Question ID : 264330154661

Option 1 ID : 264330606109

Option 2 ID : 264330606110

Option 3 ID : 264330606108

Option 4 ID : 264330606107

Status : Answered

Chosen Option : 4

Q.4 What should come in place of ? in the given series?

57 62 72 77 87 ?

- Ans**
- 1. 94
 - 2. 93
 - 3. 92
 - 4. 91

Question ID : 264330151549

Option 1 ID : 264330593826

Option 2 ID : 264330593825

Option 3 ID : 264330593824

Option 4 ID : 264330593823

Status : Answered

Chosen Option : 3

Q.5 What should come in place of ? in the given series based on the English alphabetical order?

LAT, KYS, JWR, IUQ, ?

Ans 1. GRQ

2. HSP

3. ISP

4. HQR

Question ID : 264330155777

Option 1 ID : 264330610514

Option 2 ID : 264330610513

Option 3 ID : 264330610512

Option 4 ID : 264330610511

Status : Answered

Chosen Option : 2

Q.6 Read the given statements and conclusions carefully. You have to take the given statements to be true even if they seem to be at variance from commonly known facts. You have to decide which conclusion/s logically follow/s from the given statements.

Statements: All apples are fire. All fire is hot. Some hot are crabs.

Conclusion I: No apples are hot.

Conclusion II: Some crabs are fire.

Ans 1. Only conclusion (II) is follow.

2. Neither conclusion (I) nor (II) is follow.

3. Only conclusion (I) is follow.

4. Both conclusions (I) and (II) are follow.

Question ID : 264330155918

Option 1 ID : 264330611076

Option 2 ID : 264330611077

Option 3 ID : 264330611075

Option 4 ID : 264330611078

Status : Answered

Chosen Option : 2

Q.7 Find out the correct alternative that when filled in the blanks in the same sequence will make the series logically complete.

DFZ_ D_CJ DF_I _FIH DF_G

Ans 1. DLFFK

2. KFFDL

3. KDFLF

4. FDFKL

Question ID : 264330154724

Option 1 ID : 264330606361

Option 2 ID : 264330606362

Option 3 ID : 264330606360

Option 4 ID : 264330606359

Status : Answered

Chosen Option : 2

Q.8 22 is related to 198 following a certain logic. Following the same logic, 41 is related to 369. To which of the following is 54 related to, following the same logic?

- Ans**
- 1. 286
 - 2. 486
 - 3. 268
 - 4. 468

Question ID : 264330151606
Option 1 ID : 264330594052
Option 2 ID : 264330594051
Option 3 ID : 264330594054
Option 4 ID : 264330594053
Status : Answered
Chosen Option : 2

Q.9 What should come in place of '?' in the given series?

7 16 43 ? 367 1096 3283

- Ans**
- 1. 105
 - 2. 117
 - 3. 124
 - 4. 98

Question ID : 264330151490
Option 1 ID : 264330593588
Option 2 ID : 264330593589
Option 3 ID : 264330593590
Option 4 ID : 264330593587
Status : Answered
Chosen Option : 3

Q.10 Select the word-pair that best represents a similar relationship to the one expressed in the pair of words given below.

(The words must be considered as meaningful English words and must not be related to each other based on the number of letters/number of consonants/vowels in the word)

Bacteria : Decomposition

- Ans**
- 1. Oxygen : Treatment
 - 2. Yeast : Fermentation
 - 3. Volcano : Eruption
 - 4. Antibiotic : Injection

Question ID : 264330154635
Option 1 ID : 264330606006
Option 2 ID : 264330606005
Option 3 ID : 264330606003
Option 4 ID : 264330606004
Status : Answered
Chosen Option : 2

Q.11 Which figure should replace the question mark (?) if the following figure series were to be continued?

L	I	G	Q	B	I	T	2	G	I	Q	2	
	B	6		6	G		Q	L		L	G	?
Q		T	T		L	I		6	6		T	

Ans

✗ 1.

6	I	T
	Q	2
L		G

✗ 2.

Q	2	6
	I	F
T		L

✗ 3.

6	G	T
	I	Q
2		L

✓ 4.

6	F	G
	I	T
2		L

Question ID : 264330154750

Option 1 ID : 264330606465

Option 2 ID : 264330606464

Option 3 ID : 264330606463

Option 4 ID : 264330606466

Status : Answered

Chosen Option : 2

Q.12 11 is related to 123 following a certain logic. Following the same logic, 20 is related to 402. To which of the following is 13 related to, following the same logic?

Ans ✓ 1. 171

✗ 2. 172

✗ 3. 173

✗ 4. 174

Question ID : 264330151582

Option 1 ID : 264330593955

Option 2 ID : 264330593956

Option 3 ID : 264330593957

Option 4 ID : 264330593958

Status : Answered

Chosen Option : 1

Q.13 In a certain code language, 'SCAR' is coded as '2386' and 'RACE' is coded as '8642'. What is the code for 'E' in the given code language?

- Ans
- 1. 8
 - 2. 4
 - 3. 2
 - 4. 6

Question ID : 264330151708

Option 1 ID : 264330594462

Option 2 ID : 264330594459

Option 3 ID : 264330594461

Option 4 ID : 264330594460

Status : Answered

Chosen Option : 2

Q.14 In a certain code language, 'QUALIFY' is coded as 'PTZKHYF' and 'PANTHER' is coded as 'OZMSGRE'. What is the code for 'FORCEPS' in the given code language?

- Ans
- 1. EMOCDRQ
 - 2. DMQCERP
 - 3. DNPCDSQ
 - 4. ENQBDSQ

Question ID : 264330155829

Option 1 ID : 264330610722

Option 2 ID : 264330610720

Option 3 ID : 264330610719

Option 4 ID : 264330610721

Status : Answered

Chosen Option : 4

Q.15 Select the correct mirror image of the given figure when the mirror is placed at MN as shown below.



- Ans
- 1. qbLg5eY
 - 2. qb7g2eY
 - 3. qb7g2eY
 - 4. dbg72eY

Question ID : 264330151515

Option 1 ID : 264330593687

Option 2 ID : 264330593690

Option 3 ID : 264330593688

Option 4 ID : 264330593689

Status : Answered

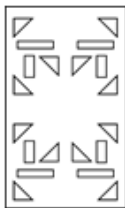
Chosen Option : 3

Q.16 The sequence of folding a piece of paper and the manner in which the folded paper is cut is shown in the following figures. How would this paper look when unfolded?

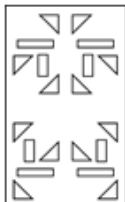


Ans

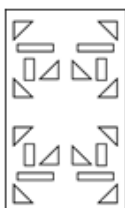
✓ 1.



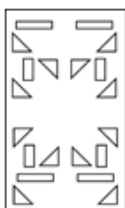
✗ 2.



✗ 3.



✗ 4.



Question ID : 264330155610

Option 1 ID : 264330609843

Option 2 ID : 264330609845

Option 3 ID : 264330609846

Option 4 ID : 264330609844

Status : Answered

Chosen Option : 1

Q.17 If 13th March 2007 is Tuesday then what will be the day of the week on 14th Sep 2017?

Ans ✗ 1. Monday

✗ 2. Tuesday

✓ 3. Thursday

✗ 4. Wednesday

Question ID : 264330154335

Option 1 ID : 264330604803

Option 2 ID : 264330604804

Option 3 ID : 264330604805

Option 4 ID : 264330604806

Status : Answered

Chosen Option : 4

Q.18 Select the combination of letters that when sequentially placed in the blanks of the given series, will complete the series.

ZY _ Z _ Z _ _ ZZ _ Z

- Ans
- 1. ZYYZZ
 - 2. ZYZYY
 - 3. YZYZZ
 - 4. YYZYZ

Question ID : 264330151643

Option 1 ID : 264330594199

Option 2 ID : 264330594201

Option 3 ID : 264330594202

Option 4 ID : 264330594200

Status : Answered

Chosen Option : 2

Q.19 Seven people, V, F, D, S, R, C, and P are sitting in a straight line, facing south. Only two people sit between V and P. Only two people sit to the right of V. D sits third to the left of S. P is an immediate neighbour of D and F. C is an immediate neighbour of S.

Total how many people sit between S and P?

- Ans
- 1. Four
 - 2. One
 - 3. Three
 - 4. Two

Question ID : 264330161694

Option 1 ID : 264330634106

Option 2 ID : 264330634103

Option 3 ID : 264330634105

Option 4 ID : 264330634104

Status : Answered

Chosen Option : 3

Q.20 What should come in place of ? in the given series?

84 88 96 108 124 ?

- Ans
- 1. 124
 - 2. 154
 - 3. 134
 - 4. 144

Question ID : 264330151543

Option 1 ID : 264330593799

Option 2 ID : 264330593802

Option 3 ID : 264330593800

Option 4 ID : 264330593801

Status : Answered

Chosen Option : 4

Q.1 In which year did the 'Battle of Buxar' take place?

- Ans 1. 1764 CE
 2. 1769 CE
 3. 1757 CE
 4. 1761 CE

Question ID : 264330162322
Option 1 ID : 264330636616
Option 2 ID : 264330636618
Option 3 ID : 264330636615
Option 4 ID : 264330636617
Status : Answered
Chosen Option : 1

Q.2 Which Article of the Indian Constitution mandates that the state should protect every monument or place of artistic or historic interest?

- Ans 1. Article 39A
 2. Article 50
 3. Article 49
 4. Article 48A

Question ID : 264330162254
Option 1 ID : 264330636346
Option 2 ID : 264330636344
Option 3 ID : 264330636343
Option 4 ID : 264330636345
Status : Answered
Chosen Option : 3

Q.3 To mark the celebration of Gandhi Jayanti, the _____ celebrates it as International Day of Non-Violence.

- Ans 1. United Nations
 2. BRICS Nations
 3. South Asian Association for Regional Cooperation
 4. Group of 20

Question ID : 264330160825
Option 1 ID : 264330630633
Option 2 ID : 264330630634
Option 3 ID : 264330630632
Option 4 ID : 264330630631
Status : Answered
Chosen Option : 1

Q.4 Alarvel Valli is a _____ dancer.

- Ans 1. Bharatnatyam
 2. Odissi
 3. Kuchipudi
 4. Kathak

Question ID : 264330159068
Option 1 ID : 264330623631
Option 2 ID : 264330623634
Option 3 ID : 264330623632
Option 4 ID : 264330623633
Status : Answered
Chosen Option : 1

Q.5 Which of the following is an example of a microfinance institution (MFI) in India?

- Ans 1. State Bank of India (SBI)
 2. Bandhan Bank
 3. ICICI Bank
 4. HDFC Bank

Question ID : 264330157296
Option 1 ID : 264330616547
Option 2 ID : 264330616549
Option 3 ID : 264330616548
Option 4 ID : 264330616550
Status : Answered
Chosen Option : 2

Q.6 Which of the following is an autobiography by Mahatma Gandhi?

- Ans 1. The Story of My Experiments with Truth
 2. My Truth
 3. Matters of Discretion
 4. My Country My Life

Question ID : 264330161756
Option 1 ID : 264330634351
Option 2 ID : 264330634354
Option 3 ID : 264330634353
Option 4 ID : 264330634352
Status : Answered
Chosen Option : 1

Q.7 Which of the following has initiated the Village Defence Guards scheme to instil a sense of self protection and ensure the safety and security of villages and infrastructural installations in and around the villages?

- Ans 1. Ladakh
 2. Uttar Pradesh
 3. Jammu and Kashmir
 4. Rajasthan

Question ID : 264330161407
Option 1 ID : 264330632957
Option 2 ID : 264330632958
Option 3 ID : 264330632955
Option 4 ID : 264330632956
Status : Answered
Chosen Option : 3

Q.8 The Sirpur Shrine is situated in which of the following states?

- Ans 1. Odisha
 2. Uttar Pradesh
 3. Chhattisgarh
 4. Bihar

Question ID : 264330160756
Option 1 ID : 264330630357
Option 2 ID : 264330630358
Option 3 ID : 264330630355
Option 4 ID : 264330630356
Status : Answered
Chosen Option : 4

Q.9 Which of the following factors does NOT affect the climate of India?

- Ans
- 1. Altitude
 - 2. Longitude
 - 3. Latitude
 - 4. Winds

Question ID : 264330157828
Option 1 ID : 264330618671
Option 2 ID : 264330618674
Option 3 ID : 264330618672
Option 4 ID : 264330618673
Status : Answered
Chosen Option : 4

Q.10 What is the common name for a saturated solution of calcium hydroxide widely used as a raw material in the chemical industry?

- Ans
- 1. Slaked lime
 - 2. Calomel
 - 3. Burnt Lime
 - 4. Limestone

Question ID : 264330161053
Option 1 ID : 264330631544
Option 2 ID : 264330631543
Option 3 ID : 264330631545
Option 4 ID : 264330631546
Status : Answered
Chosen Option : 2

Q.11 Who among the following singers is from Andhra Pradesh?

- Ans
- 1. Usha Uthup
 - 2. Asha Bhosle
 - 3. Alka Yagnik
 - 4. S Janaki

Question ID : 264330162234
Option 1 ID : 264330636264
Option 2 ID : 264330636263
Option 3 ID : 264330636266
Option 4 ID : 264330636265
Status : Answered
Chosen Option : 4

Q.12 Who led the Congress in the second round table conference held in London?

- Ans
- 1. Annie Besant
 - 2. Sarojini Naidu
 - 3. Jawahar Lal Nehru
 - 4. Mahatma Gandhi

Question ID : 264330162335
Option 1 ID : 264330636670
Option 2 ID : 264330636669
Option 3 ID : 264330636668
Option 4 ID : 264330636667
Status : Answered
Chosen Option : 4

Q.13 According to the Census of India 2011, which state has the second highest sex ratio?

- Ans 1. Kerala
 2. Tamil Nadu
 3. Assam
 4. Bihar

Question ID : 264330160159
Option 1 ID : 264330627975
Option 2 ID : 264330627976
Option 3 ID : 264330627977
Option 4 ID : 264330627978
Status : Answered
Chosen Option : 3

Q.14 Factor cost is also known as:

- Ans 1. market cost
 2. ex-factory cost
 3. input cost
 4. output cost

Question ID : 264330161458
Option 1 ID : 264330633161
Option 2 ID : 264330633162
Option 3 ID : 264330633159
Option 4 ID : 264330633160
Status : Answered
Chosen Option : 3

Q.15 Which cell found in the bone marrow acts as a repair system for the body?

- Ans 1. Bone Cells
 2. Fat Cells
 3. Muscle cells
 4. Stem cells

Question ID : 264330161085
Option 1 ID : 264330631672
Option 2 ID : 264330631673
Option 3 ID : 264330631674
Option 4 ID : 264330631671
Status : Answered
Chosen Option : 4

Q.16 Which of the following is a famous folk dance of Rajasthan?

- Ans 1. Chang Lo
 2. Daskathia
 3. Kalbelia
 4. Pala Jatra

Question ID : 264330159058
Option 1 ID : 264330623591
Option 2 ID : 264330623594
Option 3 ID : 264330623592
Option 4 ID : 264330623593
Status : Answered
Chosen Option : 3

Q.17 When was the first general election for Lok Sabha held in India?

- Ans 1. 1950-51
 2. 1949-50
 3. 1948-49
 4. 1951-52

Question ID : 264330160863
Option 1 ID : 264330630785
Option 2 ID : 264330630784
Option 3 ID : 264330630783
Option 4 ID : 264330630786
Status : Answered
Chosen Option : 4

Q.18 Who among the following female singers has been felicitated with the Bharat Ratna?

- Ans 1. Usha Uthup
 2. Lata Mangeshkar
 3. Asha Bhosle
 4. Vani Jayaram

Question ID : 264330160975
Option 1 ID : 264330631233
Option 2 ID : 264330631232
Option 3 ID : 264330631231
Option 4 ID : 264330631234
Status : Answered
Chosen Option : 2

Q.19 Which of the following states of India is the first to receive rainfall from the South West Monsoon?

- Ans 1. Himachal Pradesh
 2. Kerala
 3. Telangana
 4. Rajasthan

Question ID : 264330161518
Option 1 ID : 264330633401
Option 2 ID : 264330633400
Option 3 ID : 264330633402
Option 4 ID : 264330633399
Status : Answered
Chosen Option : 2

Q.20 Which famous Indian danseuse became the first woman to be nominated as a member of Rajya Sabha?

- Ans 1. Rukmini Devi Arundale
 2. Kamala Kumari
 3. Sitara Devi
 4. Mrinalini Sarabhai

Question ID : 264330155475
Option 1 ID : 264330609303
Option 2 ID : 264330609305
Option 3 ID : 264330609304
Option 4 ID : 264330609306
Status : Answered
Chosen Option : 4

Q.21 Which of the following is a famous novel written by Munshi Premchand?

- Ans
- 1. Gunaho Ka Devta
 - 2. Kitne Pakistan
 - 3. Rag Darbari
 - 4. Godan

Question ID : 264330155502
Option 1 ID : 264330609413
Option 2 ID : 264330609412
Option 3 ID : 264330609411
Option 4 ID : 264330609414
Status : Answered
Chosen Option : 4

Q.22 India played in the finals of the 2023 World Test Championship against Australia. Where was this match conducted?

- Ans
- 1. Dubai
 - 2. London
 - 3. Kolkata
 - 4. Sydney

Question ID : 264330161144
Option 1 ID : 264330631910
Option 2 ID : 264330631907
Option 3 ID : 264330631909
Option 4 ID : 264330631908
Status : Answered
Chosen Option : 4

Q.23 D Gukesh was awarded player of the year award in March 2023. He plays which sport?

- Ans
- 1. Snooker
 - 2. Boxing
 - 3. Badminton
 - 4. Chess

Question ID : 264330158357
Option 1 ID : 264330620788
Option 2 ID : 264330620790
Option 3 ID : 264330620787
Option 4 ID : 264330620789
Status : Answered
Chosen Option : 2

Q.24 According to the Ministry of Textile 2022-23, which state is the second largest producer of cotton?

- Ans** 1. Maharashtra
 2. Bihar
 3. Gujarat
 4. Madhya Pradesh

Question ID : 264330160142
Option 1 ID : 264330627907
Option 2 ID : 264330627909
Option 3 ID : 264330627908
Option 4 ID : 264330627910
Status : Answered
Chosen Option : 1

Q.25 In which of the following States was the final of the 2023 Intercontinental Cup football championship held?

- Ans** 1. Maharashtra
 2. Telangana
 3. Karnataka
 4. Odisha

Question ID : 264330161151
Option 1 ID : 264330631936
Option 2 ID : 264330631938
Option 3 ID : 264330631935
Option 4 ID : 264330631937
Status : Not Answered
Chosen Option : --

Section : English Language and Comprehension

Q.1 Select the INCORRECTLY spelt word.

- Ans** 1. Humorous
 2. Necassery
 3. Apparent
 4. Definite

Question ID : 264330153107
Option 1 ID : 264330599994
Option 2 ID : 264330599992
Option 3 ID : 264330599991
Option 4 ID : 264330599993
Status : Answered
Chosen Option : 2

Q.2 Select the option that can be used as a one-word substitute for the given group of words.

A small shop that sells fashionable clothes

Ans 1. Boutique

2. Store

3. Tailoring

4. Couture

Question ID : 264330152587

Option 1 ID : 264330597952

Option 2 ID : 264330597951

Option 3 ID : 264330597954

Option 4 ID : 264330597953

Status : Answered

Chosen Option : 1

Q.3 Parts of the following sentence have been given as options. Select the option that contains an error.

The blue is a beautiful colour.

Ans 1. The blue

2. is

3. a

4. beautiful colour

Question ID : 264330152790

Option 1 ID : 264330598751

Option 2 ID : 264330598752

Option 3 ID : 264330598753

Option 4 ID : 264330598754

Status : Answered

Chosen Option : 1

Q.4 Select the most appropriate option to fill in the blank.

The Nile is the _____ river of the world.

Ans 1. long

2. longer

3. more longer

4. longest

Question ID : 264330153198

Option 1 ID : 264330600351

Option 2 ID : 264330600352

Option 3 ID : 264330600354

Option 4 ID : 264330600353

Status : Answered

Chosen Option : 4

Q.5 Parts of the following sentence have been given as options. Select the option that contains an error.

Tuntun and her friends dance beautiful.

- Ans
- 1. dance
 - 2. and her friends
 - 3. Tuntun
 - 4. beautiful

Question ID : 264330155228
Option 1 ID : 264330608369
Option 2 ID : 264330608368
Option 3 ID : 264330608367
Option 4 ID : 264330608370
Status : Answered
Chosen Option : 4

Q.6 Select the most appropriate idiom to fill in the blank.
It's risky to invest all your savings in one company; it's like _____.

- Ans
- 1. going down in flames
 - 2. putting all your eggs in one basket
 - 3. biting the bullet
 - 4. breaking a leg

Question ID : 264330155216
Option 1 ID : 264330608324
Option 2 ID : 264330608325
Option 3 ID : 264330608326
Option 4 ID : 264330608323
Status : Answered
Chosen Option : 2

Q.7 Select the option that can be used as a one-word substitute for the underlined group of words.

Sometimes we have to accept replacing something with something else, if we want to move forward.

- Ans
- 1. evaluation
 - 2. change
 - 3. invasion
 - 4. invention

Question ID : 264330153492
Option 1 ID : 264330601485
Option 2 ID : 264330601486
Option 3 ID : 264330601483
Option 4 ID : 264330601484
Status : Answered
Chosen Option : 1

Q.8 Select the most appropriate **ANTONYM** of the given word.
Dishevelled

- Ans 1. Assertive
 2. Tidy
 3. Tainted
 4. Rigid

Question ID : 264330152720
Option 1 ID : 264330598480
Option 2 ID : 264330598482
Option 3 ID : 264330598481
Option 4 ID : 264330598479
Status : Not Answered
Chosen Option : --

Q.9 Select the most appropriate option to fill in the blank.
I _____ to many countries to find the source of true happiness.

- Ans 1. triveled
 2. travelled
 3. travalled
 4. travellid

Question ID : 264330153304
Option 1 ID : 264330600773
Option 2 ID : 264330600772
Option 3 ID : 264330600771
Option 4 ID : 264330600774
Status : Answered
Chosen Option : 2

Q.10 Select the **INCORRECTLY** spelt word.

- Ans 1. Abhorrent
 2. Jugglary
 3. Gesture
 4. Magnificence

Question ID : 264330152785
Option 1 ID : 264330598734
Option 2 ID : 264330598732
Option 3 ID : 264330598731
Option 4 ID : 264330598733
Status : Answered
Chosen Option : 1

Q.11 Select the most appropriate meaning of the underlined idiom in the following sentence.

Irrespective of the chaos in the classroom, our class teacher stays cool as a cucumber.

- Ans
- 1. Stays calm and composed
 - 2. Behaves like a vegetable
 - 3. Scolds all the students in the classroom
 - 4. Develops a fever

Question ID : 264330153050
Option 1 ID : 264330599768
Option 2 ID : 264330599767
Option 3 ID : 264330599770
Option 4 ID : 264330599769
Status : Answered
Chosen Option : 1

Q.12 Select the most appropriate synonym of the given word.
Hazard

- Ans
- 1. Marvel
 - 2. Miracle
 - 3. Ardent
 - 4. Accident

Question ID : 264330151822
Option 1 ID : 264330594917
Option 2 ID : 264330594916
Option 3 ID : 264330594918
Option 4 ID : 264330594915
Status : Answered
Chosen Option : 4

Q.13 Select the most appropriate option to fill in the blank.
He is a smug and very _____ person who thinks only about himself.

- Ans
- 1. arsonist
 - 2. diffident
 - 3. egoistic
 - 4. humble

Question ID : 264330153582
Option 1 ID : 264330601826
Option 2 ID : 264330601824
Option 3 ID : 264330601825
Option 4 ID : 264330601823
Status : Answered
Chosen Option : 3

Q.14 Select the word segment which substitutes the bracketed word correctly and completes the sentence meaningfully.
I (am here) since 1981.

- Ans 1. have been here
 2. had been here
 3. was here
 4. has been here

Question ID : 264330152566
Option 1 ID : 264330597869
Option 2 ID : 264330597867
Option 3 ID : 264330597868
Option 4 ID : 264330597870
Status : Answered
Chosen Option : 1

Q.15 Parts of the following sentence have been given as options. Select the option that contains an error.
You shall repented tomorrow for your misdeeds.

- Ans 1. for your misdeeds
 2. tomorrow
 3. shall repented
 4. You

Question ID : 264330152815
Option 1 ID : 264330598854
Option 2 ID : 264330598853
Option 3 ID : 264330598852
Option 4 ID : 264330598851
Status : Answered
Chosen Option : 3

Q.16 Select the most appropriate option that can substitute the underlined segment in the given sentence.

She think Alex is abandoning her.

- Ans 1. was thinking
 2. thought
 3. thinks
 4. was to think

Question ID : 264330153487
Option 1 ID : 264330601464
Option 2 ID : 264330601465
Option 3 ID : 264330601466
Option 4 ID : 264330601463
Status : Answered
Chosen Option : 3

Q.17 Select the most appropriate segment that can substitute the bracketed word in the following sentence.
The bridge that (connecting) the two valleys across the Brahmaputra river has recently been constructed in Arunachal Pradesh.

- Ans**
- 1. will be connecting
 - 2. had connected
 - 3. will be connected
 - 4. connects

Question ID : 264330152631
Option 1 ID : 264330598127
Option 2 ID : 264330598130
Option 3 ID : 264330598128
Option 4 ID : 264330598129
Status : Answered
Chosen Option : 4

Q.18 Select the most appropriate idiom to fill in the blank.
Naina has six children, and I always _____ with their names.

- Ans**
- 1. get mixed up
 - 2. get rid of
 - 3. get away clean
 - 4. get cold feet

Question ID : 264330153100
Option 1 ID : 264330599963
Option 2 ID : 264330599966
Option 3 ID : 264330599965
Option 4 ID : 264330599964
Status : Answered
Chosen Option : 1

Q.19 Select the most appropriate option to fill in the blank.
When it comes to planning her wedding, Maria wants _____.

- Ans**
- 1. down for the count
 - 2. a black sheep
 - 3. the whole fifteen miles
 - 4. the whole nine yards

Question ID : 264330151884
Option 1 ID : 264330595158
Option 2 ID : 264330595155
Option 3 ID : 264330595156
Option 4 ID : 264330595157
Status : Not Answered
Chosen Option : --

Q.20 Select the most appropriate option to fill in the blank.

I know that I can count on my best friend to be by my side through ____ and thin.

- Ans
- 1. tough
 - 2. heavy
 - 3. thick
 - 4. fat

Question ID : 264330151861

Option 1 ID : 264330595063

Option 2 ID : 264330595066

Option 3 ID : 264330595064

Option 4 ID : 264330595065

Status : Answered

Chosen Option : 3

Comprehension:

In the following passage, some words have been deleted. Read the passage carefully and select the most appropriate option to fill in each blank.

I do not know how the party ended. I do not want to know. I went (1)____ upstairs, and undressed and (2)____ into bed, and lay there in the burning dark while the last guest gurgled in the hall below about the wonderful evening she had spent. I lay there (3)____ the front door shut after her, and Lavinia's steps came up the stairs and passed the door to the guest room beyond. And then after a couple of centuries (4)____, the clock struck three and I (5)____ to sleep.

SubQuestion No : 21

Q.21 Select the most appropriate option to fill in blank no. 1.

- Ans
- 1. over
 - 2. through
 - 3. around
 - 4. straight

Question ID : 264330151843

Option 1 ID : 264330594996

Option 2 ID : 264330594998

Option 3 ID : 264330594995

Option 4 ID : 264330594997

Status : Answered

Chosen Option : 4

Comprehension:

In the following passage, some words have been deleted. Read the passage carefully and select the most appropriate option to fill in each blank.

I do not know how the party ended. I do not want to know. I went (1)___ upstairs, and undressed and (2)___ into bed, and lay there in the burning dark while the last guest gurgled in the hall below about the wonderful evening she had spent. I lay there (3)___ the front door shut after her, and Lavinia's steps came up the stairs and passed the door to the guest room beyond. And then after a couple of centuries (4)___, the clock struck three and I (5)___ to sleep.

SubQuestion No : 22

Q.22 Select the most appropriate option to fill in blank no. 2.

- Ans 1. gnawed
 2. lurched
 3. peeped
 4. crawled

Question ID : 264330151844

Option 1 ID : 264330595001

Option 2 ID : 264330595000

Option 3 ID : 264330594999

Option 4 ID : 264330595002

Status : Answered

Chosen Option : 2

Comprehension:

In the following passage, some words have been deleted. Read the passage carefully and select the most appropriate option to fill in each blank.

I do not know how the party ended. I do not want to know. I went (1)___ upstairs, and undressed and (2)___ into bed, and lay there in the burning dark while the last guest gurgled in the hall below about the wonderful evening she had spent. I lay there (3)___ the front door shut after her, and Lavinia's steps came up the stairs and passed the door to the guest room beyond. And then after a couple of centuries (4)___, the clock struck three and I (5)___ to sleep.

SubQuestion No : 23

Q.23 Select the most appropriate option to fill in the blank no. 3.

- Ans 1. still
 2. toward
 3. while
 4. down

Question ID : 264330151845

Option 1 ID : 264330595004

Option 2 ID : 264330595005

Option 3 ID : 264330595003

Option 4 ID : 264330595006

Status : Answered

Chosen Option : 3

Comprehension:

In the following passage, some words have been deleted. Read the passage carefully and select the most appropriate option to fill in each blank.

I do not know how the party ended. I do not want to know. I went (1)___ upstairs, and undressed and (2)___ into bed, and lay there in the burning dark while the last guest gurgled in the hall below about the wonderful evening she had spent. I lay there (3)___ the front door shut after her, and Lavinia's steps came up the stairs and passed the door to the guest room beyond. And then after a couple of centuries (4)___, the clock struck three and I (5)___ to sleep.

SubQuestion No : 24

Q.24 Select the most appropriate option to fill in blank no. 4.

- Ans
- 1. crossed
 - 2. eroded
 - 3. elapsed
 - 4. persisted

Question ID : 264330151846

Option 1 ID : 264330595008

Option 2 ID : 264330595010

Option 3 ID : 264330595009

Option 4 ID : 264330595007

Status : Answered

Chosen Option : 3

Comprehension:

In the following passage, some words have been deleted. Read the passage carefully and select the most appropriate option to fill in each blank.

I do not know how the party ended. I do not want to know. I went (1)___ upstairs, and undressed and (2)___ into bed, and lay there in the burning dark while the last guest gurgled in the hall below about the wonderful evening she had spent. I lay there (3)___ the front door shut after her, and Lavinia's steps came up the stairs and passed the door to the guest room beyond. And then after a couple of centuries (4)___, the clock struck three and I (5)___ to sleep.

SubQuestion No : 25

Q.25 Select the most appropriate option to fill in blank no. 5.

- Ans
- 1. dozed off
 - 2. called off
 - 3. took off
 - 4. put off

Question ID : 264330151847

Option 1 ID : 264330595014

Option 2 ID : 264330595011

Option 3 ID : 264330595013

Option 4 ID : 264330595012

Status : Answered

Chosen Option : 1