

## SSC MTS 2023 Tier 1 Sept 12 Shift 1 Question Paper with Answers

Roll Number	
Candidate Name	
Exam Date	12/09/2023
Exam Time	9:00 AM - 11:00 AM
Subject	MTS Non Tech Havaladar CBIC and CBN Examination 2023

Section : Numerical and Mathematical Ability

Q.1 Find the diameter of the sphere whose volume is  $381\frac{6}{7} \text{ m}^3$ .

- Ans
- 1. 8 m
  - 2. 7 m
  - 3. 9 m
  - 4. 18 m

Question ID : 264330156081  
Option 1 ID : 264330611725  
Option 2 ID : 264330611726  
Option 3 ID : 264330611723  
Option 4 ID : 264330611724  
Status : Answered  
Chosen Option : 3

Q.2 Ram purchased a TV for ₹65,500 and sold it for ₹89,080. What is the percentage profit he made on the TV?

- Ans
- 1. 34%
  - 2. 36%
  - 3. 42%
  - 4. 40%

Question ID : 264330156180  
Option 1 ID : 264330612119  
Option 2 ID : 264330612120  
Option 3 ID : 264330612122  
Option 4 ID : 264330612121  
Status : Answered  
Chosen Option : 2

**Q.3** A is twice as efficient as B at completing a task, and together they can finish the task in 20 days. How many days would A alone take to complete the task?

- Ans**
- 1. 34 days
  - 2. 30 days
  - 3. 28days
  - 4. 32 days

Question ID : 264330156278

Option 1 ID : 264330612514

Option 2 ID : 264330612512

Option 3 ID : 264330612511

Option 4 ID : 264330612513

Status : Answered

Chosen Option : 2

**Q.4** There are 75 students in the hostel. Due to new admissions, 15 new students join the mess, and the daily expenses of the mess increased by ₹240, while the average expenditure per head diminished by ₹5. What was the original expenditure (in ₹) of the mess?

- Ans**
- 1. 3,450
  - 2. 4,530
  - 3. 3,540
  - 4. 4,350

Question ID : 264330153758

Option 1 ID : 264330602495

Option 2 ID : 264330602498

Option 3 ID : 264330602496

Option 4 ID : 264330602497

Status : Answered

Chosen Option : 3

**Q.5** Anil sells a car to Bina at a profit of 20%. Bina sells it to Karan at a profit of 25%. If Karan pays ₹2,25,000 for it, then, find the CP of the car for Anil.

- Ans**
- 1. ₹1,75,000
  - 2. ₹2,00,000
  - 3. ₹1,50,000
  - 4. ₹1,25,000

Question ID : 264330156105

Option 1 ID : 264330611820

Option 2 ID : 264330611819

Option 3 ID : 264330611821

Option 4 ID : 264330611822

Status : Answered

Chosen Option : 3

Q.6 The HCF of two numbers is 12. Which of the following can never be their LCM?

- Ans
- 1. 24
  - 2. 74
  - 3. 48
  - 4. 60

Question ID : 264330156091

Option 1 ID : 264330611763

Option 2 ID : 264330611765

Option 3 ID : 264330611764

Option 4 ID : 264330611766

Status : Answered

Chosen Option : 2

Q.7 Find the value of  $\frac{9(3-5)-5 \text{ of } 4 \div 10}{-3 \times 5 - 2 \times 4 \div 2}$  :

- Ans
- 1.  $\frac{20}{19}$
  - 2.  $\frac{18}{19}$
  - 3.  $\frac{19}{20}$
  - 4.  $\frac{13}{14}$

Question ID : 264330154036

Option 1 ID : 264330603610

Option 2 ID : 264330603609

Option 3 ID : 264330603608

Option 4 ID : 264330603607

Status : Answered

Chosen Option : 1

Q.8 A thief is spotted by a policeman from a distance of 600 m. The thief starts running at a speed of 20 km/h and the policeman chases him running at a speed of 25 km/h. Find the distance between them after 6 minutes (in metres).

- Ans
- 1. 300
  - 2. 200
  - 3. 50
  - 4. 100

Question ID : 264330153853

Option 1 ID : 264330602875

Option 2 ID : 264330602877

Option 3 ID : 264330602876

Option 4 ID : 264330602878

Status : Answered

Chosen Option : 4

**Q.9** The simple interest on a sum of money is four times the principal. The rate per cent per annum and time in years are equal. Find the rate per cent per annum.

- Ans**
- 1. 10%
  - 2. 12%
  - 3. 15%
  - 4. 20%

Question ID : 264330156003  
 Option 1 ID : 264330611412  
 Option 2 ID : 264330611414  
 Option 3 ID : 264330611411  
 Option 4 ID : 264330611413  
 Status : Answered  
 Chosen Option : 4

**Q.10** The falling height of an object is directly proportional to the square of the time. An object falls 80 cm in 4 seconds. Then in 8 seconds, from how much height (in cm) will the object fall?

- Ans**
- 1. 420
  - 2. 320
  - 3. 480
  - 4. 360

Question ID : 264330153848  
 Option 1 ID : 264330602857  
 Option 2 ID : 264330602855  
 Option 3 ID : 264330602858  
 Option 4 ID : 264330602856  
 Status : Answered  
 Chosen Option : 2

**Q.11** The bar chart below shows the production of fertilizers by a company (in tonnes) over the years. Study the bar chart and answer the question based on it.



What was the percentage increase (rounded off to the nearest integer) in the production of fertilizers in 2009 compared to that in 2006?

- Ans**
- 1. 124%
  - 2. 118%
  - 3. 122%
  - 4. 120%

Question ID : 264330153780  
 Option 1 ID : 264330602584  
 Option 2 ID : 264330602583  
 Option 3 ID : 264330602586  
 Option 4 ID : 264330602585  
 Status : Answered  
 Chosen Option : 3

**Q.12** The average age of the boys in the class was 16 years. When 4 boys whose average age was 13 years are admitted to the class, the average age of the class was reduced by 6 months. How many boys were there initially in the class?

- Ans
- 1. 22
  - 2. 20
  - 3. 18
  - 4. 25

Question ID : 264330155989  
Option 1 ID : 264330611355  
Option 2 ID : 264330611358  
Option 3 ID : 264330611357  
Option 4 ID : 264330611356  
Status : Answered  
Chosen Option : 2

**Q.13** If a hollow sphere of an external and internal diameters of 6 cm and 4 cm, respectively, is melted into a cone of base diameter 8 cm, then the height of the cone is:

- Ans
- 1.  $4\frac{3}{4}$  cm
  - 2.  $3\frac{1}{4}$  cm
  - 3.  $5\frac{1}{4}$  cm
  - 4.  $2\frac{3}{4}$  cm

Question ID : 264330154110  
Option 1 ID : 264330603906  
Option 2 ID : 264330603903  
Option 3 ID : 264330603905  
Option 4 ID : 264330603904  
Status : Answered  
Chosen Option : 1

**Q.14** The monthly income of a person was ₹27,000 and his monthly expenditure was ₹18,000. In the next year, his income increased by 28% and his expenditure increased by 14%. Find the percentage increase in his savings.

- Ans
- 1. 51.5%
  - 2. 61.5%
  - 3. 56%
  - 4. 50.5%

Question ID : 264330157324  
Option 1 ID : 264330616662  
Option 2 ID : 264330616661  
Option 3 ID : 264330616659  
Option 4 ID : 264330616660  
Status : Answered  
Chosen Option : 3

**Q.15** Two trains having the same speed are running in opposite directions. If the length of each train is 120 metres and they cross each other in 8 seconds, then, what is the speed of each train (in km/h)?

- Ans**
- 1. 54
  - 2. 60
  - 3. 45
  - 4. 50

Question ID : 264330156114  
Option 1 ID : 264330611857  
Option 2 ID : 264330611855  
Option 3 ID : 264330611856  
Option 4 ID : 264330611858  
Status : Answered  
Chosen Option : 1

**Q.16** The sum of the two numbers is the same as nine times their difference. The ratio of the numbers is:

- Ans**
- 1. 5 : 4
  - 2. 3 : 4
  - 3. 9 : 5
  - 4. 3 : 7

Question ID : 264330154048  
Option 1 ID : 264330603655  
Option 2 ID : 264330603658  
Option 3 ID : 264330603656  
Option 4 ID : 264330603657  
Status : Answered  
Chosen Option : 1

**Q.17** In a school, the average height of the students of the tenth standard is 100 cm. The average height of boys is 118 cm, whereas the average height of girls is 95 cm. What is the number of girls in the class if there are 20 boys?

- Ans**
- 1. 72
  - 2. 63
  - 3. 54
  - 4. 36

Question ID : 264330155694  
Option 1 ID : 264330610182  
Option 2 ID : 264330610181  
Option 3 ID : 264330610180  
Option 4 ID : 264330610179  
Status : Answered  
Chosen Option : 1

**Q.18** The following table gives the annual expenditure of five families during the last 5 years (in ₹ thousand). Study the table and answer the question that follows.

Year→	2017	2018	2019	2020	2021
Family ↓					
F <sub>1</sub>	35	50	55	60	45
F <sub>2</sub>	45	35	60	55	40
F <sub>3</sub>	53	40	45	65	50
F <sub>4</sub>	40	30	35	50	45
F <sub>5</sub>	35	45	55	50	45

In which year did the family F<sub>4</sub> have the annual expenditure equal to the average expenditure of family F<sub>4</sub> from 2017 to 2021?

- Ans**
- ✓ 1. 2017
  - ✗ 2. 2021
  - ✗ 3. 2019
  - ✗ 4. 2020

Question ID : **264330157348**  
 Option 1 ID : **264330616756**  
 Option 2 ID : **264330616758**  
 Option 3 ID : **264330616755**  
 Option 4 ID : **264330616757**  
 Status : **Answered**  
 Chosen Option : **1**

**Q.19** 100 workers working 8 hours a day can dig a canal 2000 metres long in 25 days. Find the number of workers required to dig a similar canal of 2800 metres long in 32 days working 5 hours a day.

- Ans**
- ✗ 1. 170
  - ✗ 2. 180
  - ✓ 3. 175
  - ✗ 4. 165

Question ID : **264330155977**  
 Option 1 ID : **264330611308**  
 Option 2 ID : **264330611310**  
 Option 3 ID : **264330611309**  
 Option 4 ID : **264330611307**  
 Status : **Answered**  
 Chosen Option : **3**

**Q.20** Hema invested ₹1,728 at the rate of compound interest (Compounded annually) for 3 years. She got ₹4,096 after the specified period. Find the rate of interest per annum.

- Ans**
- ✗ 1.  $33\frac{1}{2}\%$
  - ✗ 2.  $30\frac{1}{2}\%$
  - ✓ 3.  $33\frac{1}{3}\%$
  - ✗ 4.  $30\frac{1}{3}\%$

Question ID : **264330155749**  
 Option 1 ID : **264330610401**  
 Option 2 ID : **264330610402**  
 Option 3 ID : **264330610399**  
 Option 4 ID : **264330610400**  
 Status : **Answered**  
 Chosen Option : **3**

Q.1 If 12th Dec 2009 is a Saturday, then what will be the day of the week on 16th Dec 2014?

- Ans
- 1. Thursday
  - 2. Friday
  - 3. Wednesday
  - 4. Tuesday

Question ID : 264330154339  
Option 1 ID : 264330604822  
Option 2 ID : 264330604819  
Option 3 ID : 264330604821  
Option 4 ID : 264330604820  
Status : Answered  
Chosen Option : 4

Q.2 What should come in place of '?' in the given series?

10 59 353 ? 12701 76205 457229

- Ans
- 1. 2149
  - 2. 2247
  - 3. 2073
  - 4. 2117

Question ID : 264330151487  
Option 1 ID : 264330593577  
Option 2 ID : 264330593578  
Option 3 ID : 264330593575  
Option 4 ID : 264330593576  
Status : Answered  
Chosen Option : 4

Q.3 In a certain code language, 'DOMINATE' is coded as 'TANIMODE' and 'FAITHFUL' is coded as 'UFHTIAFL'. What is the code for 'HIGHWAY' in the given code language?

- Ans
- 1. AWHGIHY
  - 2. IGHWAYH
  - 3. AYWHGIH
  - 4. YAWHGIH

Question ID : 264330155815  
Option 1 ID : 264330610663  
Option 2 ID : 264330610666  
Option 3 ID : 264330610665  
Option 4 ID : 264330610664  
Status : Answered  
Chosen Option : 1



Q.4 What should come in place of ? in the given series based on the English alphabetical order?

MFX, JCU, GZR, DWO, ?

- Ans
- 1. YSM
  - 2. ATL
  - 3. ZRM
  - 4. ZSL

Question ID : 264330155770

Option 1 ID : 264330610485

Option 2 ID : 264330610483

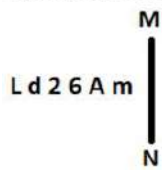
Option 3 ID : 264330610484

Option 4 ID : 264330610486

Status : Answered

Chosen Option : 2

Q.5 Select the correct mirror image of the given figure when the mirror is placed at MN as shown below.



- Ans
- 1. m A ə ʌ b J
  - 2. m A 6 ʌ b L
  - 3. w v ə ʌ b J
  - 4. m A ə d 2 J

Question ID : 264330151514

Option 1 ID : 264330593685

Option 2 ID : 264330593686

Option 3 ID : 264330593683

Option 4 ID : 264330593684

Status : Answered

Chosen Option : 1

Q.6 What should come in place of ? in the given series based on the English alphabetical order?

BLS, FJQ, JHO, NFM, ?

- Ans
- 1. QEJ
  - 2. SCK
  - 3. RDK
  - 4. QCI

Question ID : 264330155796

Option 1 ID : 264330610587

Option 2 ID : 264330610590

Option 3 ID : 264330610589

Option 4 ID : 264330610588

Status : Answered

Chosen Option : 3

**Q.7** 18 is related to 54 following a certain logic. Following the same logic, 21 is related to 63. To which of the following is 72 related to, following the same logic?

- Ans**
- 1. 222
  - 2. 220
  - 3. 218
  - 4. 216

Question ID : 264330151592  
Option 1 ID : 264330593998  
Option 2 ID : 264330593997  
Option 3 ID : 264330593996  
Option 4 ID : 264330593995  
Status : Answered  
Chosen Option : 4

**Q.8** Read the given statement(s) and conclusions carefully. Assuming that the information given in the statements is true, even if it appears to be at variance with commonly known facts, decide which of the given conclusions logically follow(s) from the statement(s).

Statements: All cups are books. All books are shirts.

Conclusions:

(I) Some cups are not shirts.

(II) Some shirts are cups.

- Ans**
- 1. Neither conclusion (I) nor (II) is follows.
  - 2. Both conclusions (I) and (II) are follows.
  - 3. Only conclusion (II) is follows.
  - 4. Only conclusion (I) is follows.

Question ID : 264330154425  
Option 1 ID : 264330605165  
Option 2 ID : 264330605166  
Option 3 ID : 264330605164  
Option 4 ID : 264330605163  
Status : Answered  
Chosen Option : 3

**Q.9** Six people, Vijay, Harsh, Golu, Satish, Karan and Awadhi are sitting in a straight line, facing north. Vijay sits 3rd from the right end. Harsh sits 3rd to the left of Vijay. Satish is an immediate neighbour of Harsh. Golu sits 3rd to the right of Satish. Awadhi is an immediate neighbour of Golu. Who sits 2nd to the right of Vijay?

- Ans**
- 1. Golu
  - 2. Awadhi
  - 3. Karan
  - 4. Satish

Question ID : 264330155664  
Option 1 ID : 264330610062  
Option 2 ID : 264330610061  
Option 3 ID : 264330610059  
Option 4 ID : 264330610060  
Status : Answered  
Chosen Option : 2

Q.10 What should come in place of ? in the given series?

41 45 54 70 95 ?

- Ans
- ✓ 1. 131
  - ✗ 2. 133
  - ✗ 3. 130
  - ✗ 4. 132

Question ID : 264330151557  
Option 1 ID : 264330593856  
Option 2 ID : 264330593858  
Option 3 ID : 264330593855  
Option 4 ID : 264330593857  
Status : Answered  
Chosen Option : 1

Q.11 Read the given statements and conclusions carefully. You have to take the given statements to be true even if they seem to be at variance from commonly known facts. You have to decide which conclusion/s logically follow/s from the given statements.

Statements: Some lipsticks are foundation. All foundation is brown. Some brown are highlighters.

Conclusion I: Some lipsticks are brown.

Conclusion II: All foundation are highlighters.

- Ans
- ✗ 1. Neither conclusion (I) nor (II) is follow.
  - ✗ 2. Both conclusions (I) and (II) are follow.
  - ✗ 3. Only conclusion (II) is follow.
  - ✓ 4. Only conclusion (I) is follow.

Question ID : 264330155936  
Option 1 ID : 264330611149  
Option 2 ID : 264330611150  
Option 3 ID : 264330611148  
Option 4 ID : 264330611147  
Status : Answered  
Chosen Option : 4

**Q.12** Which figure should replace the question mark (?) if the following figure series were to be continued?

9	5	A	9	
A C 5 9	Z O C	5 9 A	O Z	?
O Z	A C	Z O	C 5	

Ans

✗ 1.

O		
5	C	A
9	Z	

✗ 2.

C		
Z	A	O
5	9	

✓ 3.

C		
5	9	A
O	Z	

✗ 4.

C		
Z	9	5
O	A	

Question ID : 264330154738

Option 1 ID : 264330606416

Option 2 ID : 264330606415

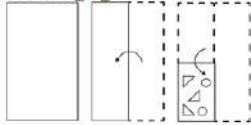
Option 3 ID : 264330606417

Option 4 ID : 264330606418

Status : Answered

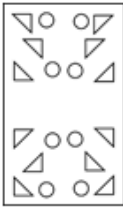
Chosen Option : 3

**Q.13** The sequence of folding a piece of paper and the manner in which the folded paper is cut is shown in the following figures. How would this paper look when unfolded?

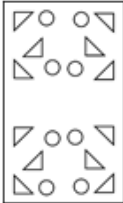


**Ans**

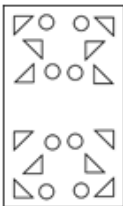
1.



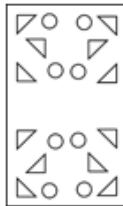
2.



3.



4.



Question ID : 264330155609

Option 1 ID : 264330609842

Option 2 ID : 264330609841

Option 3 ID : 264330609839

Option 4 ID : 264330609840

Status : Answered

Chosen Option : 4

**Q.14** Select the set in which the numbers are related in the same way as are the numbers of the following sets.

(NOTE : Operations should be performed on the whole numbers, without breaking down the numbers into its constituent digits. E.g. 13 – Operations on 13 such as adding / subtracting / multiplying etc. to 13 can be performed.

Breaking down 13 into 1 and 3 and then performing mathematical operations on 1 and 3 is not allowed)

(25, 49, 73)

(34, 23, 12)

**Ans**  1. 5, 35, 17

2. 11, 9, 18

3. 18, 22, 26

4. 13, 15, 19

Question ID : 264330151610

Option 1 ID : 264330594067

Option 2 ID : 264330594068

Option 3 ID : 264330594070

Option 4 ID : 264330594069

Status : Answered

Chosen Option : 3

**Q.15** MEOP is related to KCMN in a certain way based on the English alphabetical order. In the same way, LTDG is related to JRBE. To which of the following is UNTF related to, following the same logic?

- Ans**
- 1. SMRE
  - 2. SLRD
  - 3. VPUH
  - 4. TOSG

Question ID : 264330151681  
Option 1 ID : 264330594352  
Option 2 ID : 264330594353  
Option 3 ID : 264330594351  
Option 4 ID : 264330594354  
Status : Answered  
Chosen Option : 2

**Q.16** In a certain code language, 'DRAW' is coded as '7932' and 'WEAR' is coded as '4729'. What is the code for 'E' in the given code language?

- Ans**
- 1. 9
  - 2. 2
  - 3. 7
  - 4. 4

Question ID : 264330151687  
Option 1 ID : 264330594375  
Option 2 ID : 264330594376  
Option 3 ID : 264330594377  
Option 4 ID : 264330594378  
Status : Answered  
Chosen Option : 4

**Q.17** What will come in the place of the question mark (?) in the following equation, if '+' and '-' are interchanged and '×' and '÷' are interchanged?  
 $90 \div 4 + 75 - 93 \times 3 = ?$

- Ans**
- 1. 316
  - 2. 279
  - 3. 406
  - 4. 165

Question ID : 264330154618  
Option 1 ID : 264330605937  
Option 2 ID : 264330605936  
Option 3 ID : 264330605938  
Option 4 ID : 264330605935  
Status : Answered  
Chosen Option : 1

**Q.18** Find out the correct alternative that when filled in the blanks in the same sequence will make the series logically complete.

ZA\_J B\_BK DAB\_ \_ABM HA\_N

- Ans**
- 1. BALPC
  - 2. FCBPL
  - 3. BALFB
  - 4. CHBNK

Question ID : 264330154720  
 Option 1 ID : 264330606344  
 Option 2 ID : 264330606346  
 Option 3 ID : 264330606343  
 Option 4 ID : 264330606345  
 Status : Answered  
 Chosen Option : 3

**Q.19** What should come in place of ? in the given series?

51 53 57 59 ? 65 69

- Ans**
- 1. 63
  - 2. 64
  - 3. 62
  - 4. 65

Question ID : 264330151546  
 Option 1 ID : 264330593812  
 Option 2 ID : 264330593813  
 Option 3 ID : 264330593811  
 Option 4 ID : 264330593814  
 Status : Answered  
 Chosen Option : 1

**Q.20** If A means '+', G means '×', D means '÷', E means '-', then what will come in place of the question mark (?) in the following equation?

18 E 27 D 3 A 2 G 5 = ?

- Ans**
- 1. 29
  - 2. 17
  - 3. 43
  - 4. 31

Question ID : 264330154684  
 Option 1 ID : 264330606200  
 Option 2 ID : 264330606199  
 Option 3 ID : 264330606202  
 Option 4 ID : 264330606201  
 Status : Answered  
 Chosen Option : 2

Q.1 समुद्री डकैती विरोधी विधेयक, 2022 (Maritime Anti-Piracy Act, 2022) के संबंध में निम्नलिखित में से कौन-सा कथन सत्य है?

- 1) संसद ने दिसंबर 2022 में समुद्री डकैती विरोधी विधेयक, 2022 को राज्यसभा से मंजूरी दे दी।
- 2) यह अधिनियम भारतीय अधिकारियों को खुले समुद्र में समुद्री डकैती के खिलाफ कार्रवाई करने में सक्षम बनाता है।
- 3) यह विशिष्ट आर्थिक क्षेत्र से परे समुद्र पर लागू होता है, जो भारत के समुद्र तट से 500 समुद्री मील से ऊपर है।
- 4) अधिनियम समुद्री डकैती को किसी निजी जहाज या विमान के चालक दल या यात्रियों द्वारा निजी उद्देश्यों के लिए किसी जहाज, विमान या व्यक्ति के खिलाफ हिंसा, हिरासत या विनाश के किसी भी अवैध कार्य के रूप में परिभाषित करता है।

- Ans
- 1. 2, 3 और 4
  - 2. 1, 2 और 3
  - 3. 1, 2 और 4
  - 4. 1, 3 और 4

Question ID : 264330161417

Option 1 ID : 264330632997

Option 2 ID : 264330632995

Option 3 ID : 264330632998

Option 4 ID : 264330632996

Status : Answered

Chosen Option : 4

Q.2 How long can a person remain a minister without being a member of either House of the State Legislature?

- Ans
- 1. 15 days
  - 2. 6 months
  - 3. 1 year
  - 4. 2 months

Question ID : 264330159930

Option 1 ID : 264330627070

Option 2 ID : 264330627068

Option 3 ID : 264330627069

Option 4 ID : 264330627067

Status : Answered

Chosen Option : 1

Q.3 The world's largest camel fair is held in which of the following cities?

- Ans
- 1. Bikaner
  - 2. Pushkar
  - 3. Barmer
  - 4. Udaipur

Question ID : 264330159084

Option 1 ID : 264330623697

Option 2 ID : 264330623696

Option 3 ID : 264330623698

Option 4 ID : 264330623695

Status : Answered

Chosen Option : 2



Q.4 Who among the following Indian musicians is the inventor of Mohan Veena?

- Ans  1. Totaram Sharma  
 2. Braj Bhushan Kabra  
 3. Pandit Vishwa Mohan Bhatt  
 4. Sandeep Das

Question ID : 264330161778  
Option 1 ID : 264330634442  
Option 2 ID : 264330634441  
Option 3 ID : 264330634440  
Option 4 ID : 264330634439  
Status : Answered  
Chosen Option : 3

Q.5 Mulk Raj Anand is the author of \_\_\_\_\_.

- Ans  1. The Guide  
 2. Untouchable  
 3. The Invisible Man  
 4. A Passage to India

Question ID : 264330160973  
Option 1 ID : 264330631223  
Option 2 ID : 264330631226  
Option 3 ID : 264330631225  
Option 4 ID : 264330631224  
Status : Answered  
Chosen Option : 3

Q.6 Which of the following musicians of medieval India is referred to as 'Tuti-e-Hind' and is also regarded as the father of qawwali?

- Ans  1. Miyan Tansen  
 2. Amir Khusrau  
 3. Purandara Dasa  
 4. Swami Haridas

Question ID : 264330161770  
Option 1 ID : 264330634409  
Option 2 ID : 264330634410  
Option 3 ID : 264330634407  
Option 4 ID : 264330634408  
Status : Answered  
Chosen Option : 2

Q.7 The blue green alga Anabaena lives in the leaves of Azolla, a freshwater fern, forming which of the following relationships?

- Ans  1. Autotrophic  
 2. Symbiotic  
 3. Parasitic  
 4. Saprophytic

Question ID : 264330156603  
Option 1 ID : 264330613802  
Option 2 ID : 264330613799  
Option 3 ID : 264330613801  
Option 4 ID : 264330613800  
Status : Answered  
Chosen Option : 2

**Q.8** Who was famous for publishing a formula in 1827 that shows the mathematical relationship between current, resistance and voltage?

- Ans**
- 1. William Gilbert
  - 2. William Watson
  - 3. Gustav Kirchhoff
  - 4. Georg Simon Ohm

Question ID : 264330161047  
Option 1 ID : 264330631519  
Option 2 ID : 264330631522  
Option 3 ID : 264330631521  
Option 4 ID : 264330631520  
Status : Answered  
Chosen Option : 4

**Q.9** Identify the correct pair (name of shifting agriculture and related state) from the following.

- Ans**
- 1. Bewar – Madhya Pradesh
  - 2. Kuruwa – Punjab
  - 3. Podu – Tamil Nadu
  - 4. Bringa – Uttar Pradesh

Question ID : 264330161509  
Option 1 ID : 264330633363  
Option 2 ID : 264330633364  
Option 3 ID : 264330633366  
Option 4 ID : 264330633365  
Status : Answered  
Chosen Option : 4

**Q.10** The Balti dance of \_\_\_\_\_ is distinct as it has its own costume, music and songs in the Balti language. The dance is only performed on rare occasions, such as feasts or celebrations.

- Ans**
- 1. Uttarakhand
  - 2. Ladakh
  - 3. Kashmir
  - 4. Himachal Pradesh

Question ID : 264330160797  
Option 1 ID : 264330630522  
Option 2 ID : 264330630519  
Option 3 ID : 264330630520  
Option 4 ID : 264330630521  
Status : Answered  
Chosen Option : 4

Q.11 The Fundamental Duties of Indian Citizens were adopted from the Constitution of which country?

- Ans  1. Soviet Union  
 2. Japan  
 3. United Kingdom  
 4. United States of America

Question ID : 264330162244  
Option 1 ID : 264330636306  
Option 2 ID : 264330636305  
Option 3 ID : 264330636304  
Option 4 ID : 264330636303  
Status : Answered  
Chosen Option : 1

Q.12 Which state hosted the 36th National Games of India?

- Ans  1. Maharashtra  
 2. Karnataka  
 3. Gujarat  
 4. Punjab

Question ID : 264330158220  
Option 1 ID : 264330620240  
Option 2 ID : 264330620241  
Option 3 ID : 264330620239  
Option 4 ID : 264330620242  
Status : Answered  
Chosen Option : 4

Q.13 Jet streams are a particular form of:

- Ans  1. weather fronts  
 2. atmospheric pollution  
 3. geostrophic winds  
 4. periodic water motion

Question ID : 264330161304  
Option 1 ID : 264330632545  
Option 2 ID : 264330632543  
Option 3 ID : 264330632546  
Option 4 ID : 264330632544  
Status : Answered  
Chosen Option : 2

Q.14 According to the Global Multidimensional Poverty Index Report 2022, a total of 415 million people exited multidimensional poverty in India in the last \_\_\_\_\_.

- Ans  1. 15 years  
 2. 5 years  
 3. 10 years  
 4. 20 years

Question ID : 264330161568  
Option 1 ID : 264330633601  
Option 2 ID : 264330633599  
Option 3 ID : 264330633600  
Option 4 ID : 264330633602  
Status : Answered  
Chosen Option : 3

Q.15 What is the primary function of a commercial bank?

- Ans  1. Issuing currency notes and coins  
 2. Conducting monetary policy  
 3. Granting loans and accepting deposits  
 4. Regulating the money supply

Question ID : 264330157304  
Option 1 ID : 264330616579  
Option 2 ID : 264330616582  
Option 3 ID : 264330616581  
Option 4 ID : 264330616580  
Status : Answered  
Chosen Option : 3

Q.16 Which of the following is an example of revenue receipt in the government budget?

- Ans  1. Sale of government-owned land  
 2. Repayment of a loan by a state-owned company  
 3. Dividends received from a state-owned enterprise  
 4. Borrowing money from international organisations

Question ID : 264330157277  
Option 1 ID : 264330616471  
Option 2 ID : 264330616473  
Option 3 ID : 264330616474  
Option 4 ID : 264330616472  
Status : Answered  
Chosen Option : 1

Q.17 Birsa Munda Hockey Stadium was built in which state?

- Ans  1. Gujarat  
 2. Maharashtra  
 3. Jharkhand  
 4. Odisha

Question ID : 264330158242  
Option 1 ID : 264330620328  
Option 2 ID : 264330620329  
Option 3 ID : 264330620330  
Option 4 ID : 264330620327  
Status : Answered  
Chosen Option : 3

Q.18 Who received the title Pandita from the faculty of Calcutta University for her knowledge of Sanskrit?

- Ans  1. Rokaya Sakhawat Hossain  
 2. Ramabai Sarasvati  
 3. Sarojini Naidu  
 4. Rash Sundari Devi

Question ID : 264330160887  
Option 1 ID : 264330630880  
Option 2 ID : 264330630882  
Option 3 ID : 264330630881  
Option 4 ID : 264330630879  
Status : Answered  
Chosen Option : 2

**Q.19** Rani Machaiah from Karnataka was awarded the Padma Shri for her contribution to popularising \_\_\_\_\_ in and outside Karnataka.

- Ans**
- 1. Kamsale Nritya
  - 2. Kuniitha
  - 3. Karadi Majalu
  - 4. Ummathat

Question ID : 264330160804  
Option 1 ID : 264330630549  
Option 2 ID : 264330630547  
Option 3 ID : 264330630550  
Option 4 ID : 264330630548  
Status : Answered  
Chosen Option : 3

**Q.20** Shri Domar Singh Kunvar from Chhattisgarh was honoured with \_\_\_\_\_ in the year 2023 for his contribution to 'Natya Nach'.

- Ans**
- 1. Padma Bhushan
  - 2. Bharat Ratna
  - 3. Padma Shri
  - 4. Padma Vibhushan

Question ID : 264330155527  
Option 1 ID : 264330609512  
Option 2 ID : 264330609514  
Option 3 ID : 264330609511  
Option 4 ID : 264330609513  
Status : Answered  
Chosen Option : 3

**Q.21** Which of the following hills are located in Purvachal?

- Ans**
- 1. Mizo hills and Naga hills
  - 2. Shevroy hills and Javadi hills
  - 3. Khasi and Jaintia hills
  - 4. Anai Mudi and Doda Betta

Question ID : 264330160150  
Option 1 ID : 264330627939  
Option 2 ID : 264330627942  
Option 3 ID : 264330627940  
Option 4 ID : 264330627941  
Status : Answered  
Chosen Option : 3

**Q.22** The mausoleum of the Taj Mahal was designed by \_\_\_\_\_.

- Ans**
- 1. Bhaktiyar Lahori
  - 2. Mohammad Isha
  - 3. Shah Jahan
  - 4. Ustad Ahmad Lahori

Question ID : 264330160766  
Option 1 ID : 264330630395  
Option 2 ID : 264330630397  
Option 3 ID : 264330630398  
Option 4 ID : 264330630396  
Status : Answered  
Chosen Option : 4

**Q.23** What was the Swadeshi Movement called in the state of Andhra Pradesh?

- Ans**
- 1. Gadar Movement
  - 2. Quit India Movement
  - 3. Khilafat Movement
  - 4. Vande Mataram Movement

Question ID : 264330161739  
Option 1 ID : 264330634284  
Option 2 ID : 264330634285  
Option 3 ID : 264330634283  
Option 4 ID : 264330634286  
Status : Answered  
Chosen Option : 1

**Q.24** 'Midnight's Children' is a novel by which of the following writers?

- Ans**
- 1. Jane Austen
  - 2. Vikram Seth
  - 3. Chetan Bhagat
  - 4. Salman Rushdie

Question ID : 264330160968  
Option 1 ID : 264330631206  
Option 2 ID : 264330631204  
Option 3 ID : 264330631203  
Option 4 ID : 264330631205  
Status : Answered  
Chosen Option : 1

**Q.25** Which of the following countries hosted the IBA Women's World Boxing Championships for the third time in March 2023?

- Ans**
- 1. Hungary
  - 2. United Kingdom
  - 3. Malaysia
  - 4. India

Question ID : 264330161442  
Option 1 ID : 264330633096  
Option 2 ID : 264330633095  
Option 3 ID : 264330633097  
Option 4 ID : 264330633098  
Status : Answered  
Chosen Option : 3

Q.1 Select the most appropriate meaning of the given idiom.

Castles in the air

- Ans  1. Unrealistic and impossible plan  
 2. Unexpected change in the climate  
 3. Realistic and possible plan  
 4. Strong hope to get success

Question ID : 264330152905  
Option 1 ID : 264330599207  
Option 2 ID : 264330599210  
Option 3 ID : 264330599208  
Option 4 ID : 264330599209  
Status : Answered  
Chosen Option : 1

Q.2 Four words of the following sentence have been underlined and given as options. Select the option that contains a spelling error.  
Ongoing climate change, caused by the acumulation of greenhouse gases in the atmosphere, is happening on a timescale of decades to centuries and is driving environmental changes worldwide.

- Ans  1. environmental  
 2. atmosphere  
 3. acumulation  
 4. decades

Question ID : 264330151929  
Option 1 ID : 264330595334  
Option 2 ID : 264330595332  
Option 3 ID : 264330595331  
Option 4 ID : 264330595333  
Status : Answered  
Chosen Option : 3

Q.3 Select the most appropriate synonym of the given word.  
Laconic

- Ans  1. Reasonable  
 2. Fanciful  
 3. Concise  
 4. Certain

Question ID : 264330152682  
Option 1 ID : 264330598334  
Option 2 ID : 264330598333  
Option 3 ID : 264330598332  
Option 4 ID : 264330598331  
Status : Answered  
Chosen Option : 1

**Q.4** Select the most appropriate option to fill in the blank.

Make-up was \_\_\_\_\_ she hardly wore.

- Ans  1. anything  
 2. something  
 3. anybody  
 4. someone

Question ID : 264330153494  
Option 1 ID : 264330601494  
Option 2 ID : 264330601492  
Option 3 ID : 264330601493  
Option 4 ID : 264330601491  
Status : Answered  
Chosen Option : 2

**Q.5** Select the most appropriate option that can substitute the underlined segment in the given sentence.

The manager asked me if I have completed my projects.

- Ans  1. if he has completed my projects  
 2. if I has completed my projects  
 3. if I had completed my projects  
 4. if I shall have completed my projects

Question ID : 264330152713  
Option 1 ID : 264330598453  
Option 2 ID : 264330598451  
Option 3 ID : 264330598454  
Option 4 ID : 264330598452  
Status : Answered  
Chosen Option : 3

**Q.6** Select the option that can be used as a one-word substitute for the given group of words.

Pause indecisively

- Ans  1. Hibernate  
 2. Hesitate  
 3. Hoist  
 4. Hobble

Question ID : 264330151910  
Option 1 ID : 264330595256  
Option 2 ID : 264330595255  
Option 3 ID : 264330595258  
Option 4 ID : 264330595257  
Status : Answered  
Chosen Option : 1



Q.7 The following sentence has been split into four segments. Identify the segment that contains a grammatical error and select the option which rectifies that error.

The SNAP-10 A / was launched on 3 April 1965 / on a Atlas-Agena D rocket / from Vandenberg Air Force Base.

- Ans  1. at Vandenberg Air Force Base.  
 2. A SNAP-10 A  
 3. was launch on 3 April 1965  
 4. on an Atlas-Agena D rocket

Question ID : 264330141342  
Option 1 ID : 264330553704  
Option 2 ID : 264330553705  
Option 3 ID : 264330553703  
Option 4 ID : 264330553706  
Status : Answered  
Chosen Option : 4

Q.8 Select the correct spelling of the underlined word in the following sentence.

He dispised the taste of black coffee.

- Ans  1. despisid  
 2. disspised  
 3. despised  
 4. despeded

Question ID : 264330153082  
Option 1 ID : 264330599891  
Option 2 ID : 264330599893  
Option 3 ID : 264330599894  
Option 4 ID : 264330599892  
Status : Answered  
Chosen Option : 3

Q.9 Parts of the given sentence have been underlined. One of them contains an error. The underlined parts are given as options with some changes. Select the option that correctly rectifies the error.

This car is lesser expensive than the one I had come to buy.

- Ans  1. for  
 2. came  
 3. ones  
 4. less

Question ID : 264330153176  
Option 1 ID : 264330600266  
Option 2 ID : 264330600265  
Option 3 ID : 264330600264  
Option 4 ID : 264330600263  
Status : Answered  
Chosen Option : 4

Q.10 Select the appropriate meaning of the given idiom.

**Grasping at straws**

- Ans  1. Futile attempts to win  
 2. Desperate attempt to succeed  
 3. Holding the last strands of straw  
 4. Wasting time enjoying and relaxing

Question ID : 264330152979  
Option 1 ID : 264330599490  
Option 2 ID : 264330599488  
Option 3 ID : 264330599487  
Option 4 ID : 264330599489  
Status : Answered  
Chosen Option : 2

Q.11 Select the most appropriate idiom to fill in the blank.  
She told me, \_\_\_\_\_, that she was going to live in New York.

- Ans  1. blue blood  
 2. black and blue  
 3. out of the blue  
 4. once in a blue moon

Question ID : 264330153097  
Option 1 ID : 264330599954  
Option 2 ID : 264330599952  
Option 3 ID : 264330599953  
Option 4 ID : 264330599951  
Status : Answered  
Chosen Option : 3

Q.12 Select the most appropriate synonym of the bracketed word in the following sentence to fill in the blank.  
The medical procedure was successful, but the patient experienced some minor \_\_\_\_\_(troubles) during recovery.

- Ans  1. applications  
 2. complications  
 3. transformations  
 4. obligations

Question ID : 264330152659  
Option 1 ID : 264330598239  
Option 2 ID : 264330598242  
Option 3 ID : 264330598240  
Option 4 ID : 264330598241  
Status : Answered  
Chosen Option : 2

Q.13 The following sentence has been divided into four parts. Identify the part that contains an error.

(A) It is said / (B) that fortune / (C) favour the / (D) brave.

- Ans
- 1. B
  - 2. C
  - 3. A
  - 4. D

Question ID : 264330152625  
Option 1 ID : 264330598104  
Option 2 ID : 264330598105  
Option 3 ID : 264330598103  
Option 4 ID : 264330598106  
Status : Answered  
Chosen Option : 2

Q.14 Select the most appropriate option that can substitute the underlined segment in the given sentence.

Teenage is that phase of life when you are proposed to the world outside.

- Ans
- 1. you are exposed to
  - 2. you are excited with
  - 3. one are proposed to
  - 4. you are interrupted to

Question ID : 264330151808  
Option 1 ID : 264330594860  
Option 2 ID : 264330594861  
Option 3 ID : 264330594859  
Option 4 ID : 264330594862  
Status : Answered  
Chosen Option : 1

Q.15 Select the INCORRECTLY spelt word.

- Ans
- 1. Sergeant
  - 2. Playwright
  - 3. Experiace
  - 4. Leisure

Question ID : 264330153597  
Option 1 ID : 264330601878  
Option 2 ID : 264330601875  
Option 3 ID : 264330601876  
Option 4 ID : 264330601877  
Status : Answered  
Chosen Option : 3

**Q.16** Select the most appropriate option to fill in the blank.  
Ravi has little in \_\_\_\_\_ with his friend, Senthil.

- Ans  1. common  
 2. contention  
 3. formal  
 4. normal

Question ID : 264330153421  
Option 1 ID : 264330601218  
Option 2 ID : 264330601215  
Option 3 ID : 264330601217  
Option 4 ID : 264330601216  
Status : Answered  
Chosen Option : 2

**Q.17** Select the most appropriate ANTONYM of the given word.  
Dense

- Ans  1. Sparse  
 2. Opaque  
 3. Closed  
 4. Thick

Question ID : 264330152589  
Option 1 ID : 264330597959  
Option 2 ID : 264330597961  
Option 3 ID : 264330597962  
Option 4 ID : 264330597960  
Status : Answered  
Chosen Option : 1

**Q.18** The following sentence has been divided into parts. One of them may contain an error.  
Select the part that contains the error from the given options. If you don't find any error, mark 'No error' as your answer.

The fight of the cobra and the mongoose / is a classic drama often seen in India, / and the outcome was largely the same.

- Ans  1. The fight of the cobra and the mongoose  
 2. No error  
 3. is a classic drama often seen in India  
 4. and the outcome was largely the same

Question ID : 264330153617  
Option 1 ID : 264330601951  
Option 2 ID : 264330601954  
Option 3 ID : 264330601953  
Option 4 ID : 264330601952  
Status : Answered  
Chosen Option : 1

**Q.19** The following sentence has been split into four segments. Identify the segment that contains a grammatical error.

The little child / wrote his name / quick / on the wall.

- Ans  1. quick  
 2. wrote his name  
 3. on the wall  
 4. The little child

Question ID : 264330153183

Option 1 ID : 264330600293

Option 2 ID : 264330600292

Option 3 ID : 264330600294

Option 4 ID : 264330600291

Status : Answered

Chosen Option : 1

**Q.20** Select the most appropriate meaning of the given idiom.

**Bone to pick**

- Ans  1. To be angry about something and want to discuss it  
 2. To stop trying hard  
 3. To not give up  
 4. Putting in extra effort

Question ID : 264330153012

Option 1 ID : 264330599620

Option 2 ID : 264330599619

Option 3 ID : 264330599622

Option 4 ID : 264330599621

Status : Answered

Chosen Option : 1

**Comprehension:**

In the following passage, some words have been deleted. Read the passage carefully and select the most appropriate option to fill in each blank.

Health is the most valuable of all earthly possessions. Without it all the rest are worth (1)\_\_\_\_\_. To enjoy good health we should refrain from excess in eating. We should eat moderately and devour whatever (2)\_\_\_\_\_ get. When you sit among many for a dinner, do not reach your hand out (3)\_\_\_\_\_ of all. A little food is sufficient for us. Sound sleep comes of a light stomach. Such a man rises (4)\_\_\_\_\_ in the morning and is at ease with himself. So to (5)\_\_\_\_\_ good health we should eat moderately, for a man who does not overeat enjoys sound sleep and rises early completely refreshed.

**SubQuestion No : 21**

**Q.21** Select the most appropriate option to fill in blank no. 1.

- Ans  1. it  
 2. nothing  
 3. everything  
 4. all

Question ID : 264330153371

Option 1 ID : 264330601033

Option 2 ID : 264330601032

Option 3 ID : 264330601034

Option 4 ID : 264330601031

Status : Answered

Chosen Option : 2

**Comprehension:**

In the following passage, some words have been deleted. Read the passage carefully and select the most appropriate option to fill in each blank.

Health is the most valuable of all earthly possessions. Without it all the rest are worth (1)\_\_\_\_\_. To enjoy good health we should refrain from excess in eating. We should eat moderately and devour whatever (2)\_\_\_\_\_ get. When you sit among many for a dinner, do not reach your hand out (3)\_\_\_\_\_ of all. A little food is sufficient for us. Sound sleep comes of a light stomach. Such a man rises (4)\_\_\_\_\_ in the morning and is at ease with himself. So to (5)\_\_\_\_\_ good health we should eat moderately, for a man who does not overeat enjoys sound sleep and rises early completely refreshed.

**SubQuestion No : 22**

**Q.22** Select the most appropriate option to fill in blank no. 2.

- Ans
- 1. us
  - 2. he
  - 3. we
  - 4. it

Question ID : 264330153372

Option 1 ID : 264330601037

Option 2 ID : 264330601035

Option 3 ID : 264330601036

Option 4 ID : 264330601038

Status : Answered

Chosen Option : 3

**Comprehension:**

In the following passage, some words have been deleted. Read the passage carefully and select the most appropriate option to fill in each blank.

Health is the most valuable of all earthly possessions. Without it all the rest are worth (1)\_\_\_\_\_. To enjoy good health we should refrain from excess in eating. We should eat moderately and devour whatever (2)\_\_\_\_\_ get. When you sit among many for a dinner, do not reach your hand out (3)\_\_\_\_\_ of all. A little food is sufficient for us. Sound sleep comes of a light stomach. Such a man rises (4)\_\_\_\_\_ in the morning and is at ease with himself. So to (5)\_\_\_\_\_ good health we should eat moderately, for a man who does not overeat enjoys sound sleep and rises early completely refreshed.

**SubQuestion No : 23**

**Q.23** Select the most appropriate option to fill in blank no. 3.

- Ans
- 1. first
  - 2. second
  - 3. last
  - 4. end

Question ID : 264330153373

Option 1 ID : 264330601039

Option 2 ID : 264330601042

Option 3 ID : 264330601040

Option 4 ID : 264330601041

Status : Answered

Chosen Option : 1

**Comprehension:**

In the following passage, some words have been deleted. Read the passage carefully and select the most appropriate option to fill in each blank.

Health is the most valuable of all earthly possessions. Without it all the rest are worth (1)\_\_\_\_\_. To enjoy good health we should refrain from excess in eating. We should eat moderately and devour whatever (2)\_\_\_\_\_ get. When you sit among many for a dinner, do not reach your hand out (3)\_\_\_\_\_ of all. A little food is sufficient for us. Sound sleep comes of a light stomach. Such a man rises (4)\_\_\_\_\_ in the morning and is at ease with himself. So to (5)\_\_\_\_\_ good health we should eat moderately, for a man who does not overeat enjoys sound sleep and rises early completely refreshed.

**SubQuestion No : 24**

**Q.24** Select the most appropriate option to fill in blank no. 4.

- Ans  1. late  
 2. early  
 3. active  
 4. idle

Question ID : 264330153374

Option 1 ID : 264330601044

Option 2 ID : 264330601045

Option 3 ID : 264330601043

Option 4 ID : 264330601046

Status : Answered

Chosen Option : 2

**Comprehension:**

In the following passage, some words have been deleted. Read the passage carefully and select the most appropriate option to fill in each blank.

Health is the most valuable of all earthly possessions. Without it all the rest are worth (1)\_\_\_\_\_. To enjoy good health we should refrain from excess in eating. We should eat moderately and devour whatever (2)\_\_\_\_\_ get. When you sit among many for a dinner, do not reach your hand out (3)\_\_\_\_\_ of all. A little food is sufficient for us. Sound sleep comes of a light stomach. Such a man rises (4)\_\_\_\_\_ in the morning and is at ease with himself. So to (5)\_\_\_\_\_ good health we should eat moderately, for a man who does not overeat enjoys sound sleep and rises early completely refreshed.

**SubQuestion No : 25**

**Q.25** Select the most appropriate option to fill in blank no. 5.

- Ans  1. lose  
 2. benefit  
 3. reward  
 4. enjoy

Question ID : 264330153375

Option 1 ID : 264330601050

Option 2 ID : 264330601047

Option 3 ID : 264330601048

Option 4 ID : 264330601049

Status : Answered

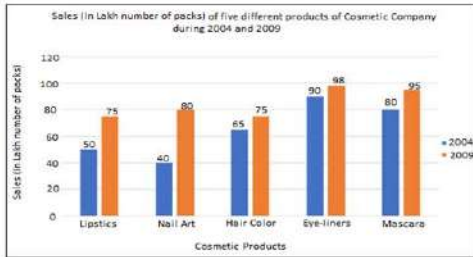
Chosen Option : 4

## SSC MTS 2023 Tier 1 Sept 12 Shift 2 Question Paper with Answers

Roll Number	
Candidate Name	
Exam Date	12/09/2023
Exam Time	12:30 PM - 2:30 PM
Subject	MTS Non Tech Havaladar CBIC and CBN Examination 2023

### Section : Numerical and Mathematical Ability

**Q.1** निम्नलिखित दंड आलेख में 2004 और 2009 के बीच एक कंपनी द्वारा पांच कॉस्मेटिक उत्पादों की बिक्री को (पैक की लाख संख्या में) दर्शाया गया है। दंड आलेख का अध्ययन कीजिए और उसके आधार पर प्रश्न का उत्तर दीजिए।



संदर्भ: Sales (in lakh number of packs) of five different products of Cosmetic company during 2004 and 2009 = 2004 और 2009 के दौरान कॉस्मेटिक कंपनी के पांच अलग-अलग उत्पादों की बिक्री (पैक की लाख संख्या में), Sales (in lakh number of packs) = बिक्री (पैक की लाख संख्या में), Cosmetic products = कॉस्मेटिक उत्पाद, Lipstics - लिपस्टिक, Nail Art - नैल आर्ट, Hair color - हैयर कलर, Eye-liners - आइ लाइनर, Mascara - मसकारा

2004 की तुलना में 2009 में सभी कॉस्मेटिक उत्पादों की मिलाकर औसत बिक्री में प्रतिशत वृद्धि (निकटतम पूर्णांक तक सन्निकटित) कितनी है?

- Ans
- 1. 36%
  - 2. 30%
  - 3. 28%
  - 4. 33%

Question ID : 264330153781

Option 1 ID : 264330602588

Option 2 ID : 264330602589

Option 3 ID : 264330602590

Option 4 ID : 264330602587

Status : Not Answered

Chosen Option : --



Q.2

What is the value of  $\frac{\left[\frac{1}{5} \div \frac{1}{5} \times \frac{1}{5}\right] \times \frac{1}{5}}{\left[\frac{1}{9} + \frac{1}{9} \times \frac{1}{9}\right] \times \frac{1}{10}} + \left(1 - \frac{6}{25}\right) = ?$

- Ans
- 1. 2
  - 2. 1
  - 3. 3
  - 4. 4

Question ID : 264330153754

Option 1 ID : 264330602481

Option 2 ID : 264330602482

Option 3 ID : 264330602480

Option 4 ID : 264330602479

Status : Answered

Chosen Option : 4

Q.3

The average score of 22 players in an IPL match is 72. Out of these 22 players, the average score of 10 players is 80, the next 5 players got an average score of 75 and the rest 5 players got an average of 55. Then the average score of the remaining two players is:

- Ans
- 1. 65
  - 2. 67
  - 3. 72
  - 4. 80

Question ID : 264330154042

Option 1 ID : 264330603632

Option 2 ID : 264330603634

Option 3 ID : 264330603633

Option 4 ID : 264330603631

Status : Not Answered

Chosen Option : --

Q.4

The product of two numbers is 4107. If the HCF of these numbers is 37, then the greater number is:

- Ans
- 1. 111
  - 2. 74
  - 3. 185
  - 4. 37

Question ID : 264330156246

Option 1 ID : 264330612385

Option 2 ID : 264330612384

Option 3 ID : 264330612386

Option 4 ID : 264330612383

Status : Not Answered

Chosen Option : --

**Q.5** If the diameter of a solid sphere is 42 cm, then the surface area of the sphere is: ( use  $\pi = \frac{22}{7}$  )

- Ans**
- 1. 5854 cm<sup>2</sup>
  - 2. 3256 cm<sup>2</sup>
  - 3. 5544 cm<sup>2</sup>
  - 4. 6897 cm<sup>2</sup>

Question ID : 264330156538  
 Option 1 ID : 264330613541  
 Option 2 ID : 264330613540  
 Option 3 ID : 264330613539  
 Option 4 ID : 264330613542  
 Status : Not Answered  
 Chosen Option : --

**Q.6** A and B can do a piece of work in 18 and 36 days, respectively. They start working together but A leaves after 3 days. How much time will B take to complete the remaining work?

- Ans**
- 1. 22 days
  - 2. 24 days
  - 3. 30 days
  - 4. 27 days

Question ID : 264330154096  
 Option 1 ID : 264330603850  
 Option 2 ID : 264330603849  
 Option 3 ID : 264330603848  
 Option 4 ID : 264330603847  
 Status : Answered  
 Chosen Option : 3

**Q.7** जब  $x = 1$  होता है तो  $y, x + 3$  और  $y = 8$  के अनुक्रमानुपाती होता है। जब  $z = 6$  होता है तो  $x, z$  और  $x = 2$  के व्युत्क्रमानुपाती होता है।  $y$  और  $z$  के बीच संबंध ज्ञात कीजिए।

- Ans**
- 1.  $(y - 6)/z = 24$
  - 2.  $(y - 6)/z = 12$
  - 3.  $z (y - 6) = 12$
  - 4.  $z (y - 6) = 24$

Question ID : 264330153847  
 Option 1 ID : 264330602853  
 Option 2 ID : 264330602851  
 Option 3 ID : 264330602852  
 Option 4 ID : 264330602854  
 Status : Not Answered  
 Chosen Option : --

**Q.8** Sandeep drives a distance of 500 metres to a store in 175 seconds. Then he drives 400 metres to another store in 125 seconds. What is his average speed (in m/s)?

- Ans
- 1. 3.5
  - 2. 3
  - 3. 2
  - 4. 2.5

Question ID : 264330156214  
Option 1 ID : 264330612258  
Option 2 ID : 264330612257  
Option 3 ID : 264330612255  
Option 4 ID : 264330612256  
Status : Answered  
Chosen Option : 2

**Q.9** A taxi goes from city P to city Q at an average speed of 60 km/h. On the return journey, due to traffic, the average speed of the taxi falls by 20 km/h. Find the average speed of a taxi (in km/h) for the entire journey.

- Ans
- 1. 46
  - 2. 40
  - 3. 42
  - 4. 48

Question ID : 264330155956  
Option 1 ID : 264330611226  
Option 2 ID : 264330611223  
Option 3 ID : 264330611224  
Option 4 ID : 264330611225  
Status : Not Answered  
Chosen Option : --

**Q.10** Two places A and B are 60 km apart from each other on a highway. A car starts from A and another car from B at the same time. If they move in the same direction, they meet each other in 6 hours. If they move in the opposite direction towards each other, they meet in 1 hour 30 minutes. Find the speeds of the cars (in km/h).

- Ans
- 1. 15, 18
  - 2. 15, 20
  - 3. 25, 15
  - 4. 25, 20

Question ID : 264330156006  
Option 1 ID : 264330611426  
Option 2 ID : 264330611424  
Option 3 ID : 264330611423  
Option 4 ID : 264330611425  
Status : Not Answered  
Chosen Option : --

**Q.11** A conical tent is set to accommodate 15 persons. Each person must have 5 square metres of space on the ground and 30 cubic metres of air to breathe. What is the height of the cone?

- Ans**
- 1. 15 m
  - 2. 22 m
  - 3. 13 m
  - 4. 18 m

Question ID : **264330156200**  
Option 1 ID : **264330612200**  
Option 2 ID : **264330612202**  
Option 3 ID : **264330612199**  
Option 4 ID : **264330612201**  
Status : **Not Answered**  
Chosen Option : --

**Q.12** A thief is spotted by a policeman from a distance of 249 m. When the policeman starts the chase, the thief also starts running. Assuming the speed of the thief is 4 m/s and that of the policeman is 7 m/s, how far the thief would have run before he is overtaken by the policeman?

- Ans**
- 1. 521 m
  - 2. 332 m
  - 3. 747 m
  - 4. 249 m

Question ID : **264330153881**  
Option 1 ID : **264330602987**  
Option 2 ID : **264330602988**  
Option 3 ID : **264330602989**  
Option 4 ID : **264330602990**  
Status : **Not Answered**  
Chosen Option : --

**Q.13** Find the simple interest on ₹8,000 at the rate of 10% per annum in 6 years.

- Ans**
- 1. ₹4,200
  - 2. ₹4,400
  - 3. ₹4,800
  - 4. ₹4,600

Question ID : **264330155964**  
Option 1 ID : **264330611257**  
Option 2 ID : **264330611258**  
Option 3 ID : **264330611255**  
Option 4 ID : **264330611256**  
Status : **Answered**  
Chosen Option : **3**

**Q.14** By selling at a loss of 12% instead of a loss of 18% an article sells for ₹120 more. Find its CP.

- Ans
- 1. ₹ 2,100
  - 2. ₹ 2,000
  - 3. ₹ 1,500
  - 4. ₹ 1,800

Question ID : 264330156073  
Option 1 ID : 264330611691  
Option 2 ID : 264330611694  
Option 3 ID : 264330611693  
Option 4 ID : 264330611692  
Status : Not Answered  
Chosen Option : --

**Q.15** If due to a 12% decrease in the price of sugar, Akshat can buy 7 kg more sugar for ₹1,200, then find the actual price (in ₹) of sugar. (Rounded off to 2 decimal places)

- Ans
- 1. 23.38
  - 2. 28.25
  - 3. 25.79
  - 4. 26.35

Question ID : 264330155732  
Option 1 ID : 264330610334  
Option 2 ID : 264330610331  
Option 3 ID : 264330610333  
Option 4 ID : 264330610332  
Status : Not Answered  
Chosen Option : --

**Q.16** The ratio of number of students in schools A and B is 5 : 8. If the number of students in schools A and B is increased by 20% and 15%, respectively, find the new ratio of students in schools A and B, respectively.

- Ans
- 1. 15 : 23
  - 2. 15 : 13
  - 3. 13 : 15
  - 4. 12 : 13

Question ID : 264330153843  
Option 1 ID : 264330602838  
Option 2 ID : 264330602835  
Option 3 ID : 264330602836  
Option 4 ID : 264330602837  
Status : Not Answered  
Chosen Option : --

**Q.17** Study the following table carefully and answer the question that follows.  
The table shows the total production (in thousands) of Company 1, Company 2, Company 3 and Company 4 in four different years.

Year	Total production of Company 1	Total production of Company 2	Total production of Company 3	Total production of Company 4
2019	65	76	64	76
2020	88	85	72	68
2021	84	75	68	96
2022	71	84	76	72

Which company has the maximum average of production from the year 2019 to 2022?

- Ans  1. Company 2  
 2. Company 4  
 3. Company 1  
 4. Company 3

Question ID : 264330157900

Option 1 ID : 264330618960

Option 2 ID : 264330618962

Option 3 ID : 264330618959

Option 4 ID : 264330618961

Status : Answered

Chosen Option : 1

**Q.18** Working 6 hours a day, 15 persons can complete a certain work in 26 days. In how many days would 13 persons complete the same work, working 10 hours a day?

- Ans  1. 17  
 2. 15  
 3. 20  
 4. 18

Question ID : 264330155976

Option 1 ID : 264330611306

Option 2 ID : 264330611305

Option 3 ID : 264330611304

Option 4 ID : 264330611303

Status : Answered

Chosen Option : 4

**Q.19** Raman buys an article for ₹1,00,000 and sells it to Mohit for ₹1,20,000. Mohit again sells the same article to Rashmi for ₹1,00,000. What is the percentage loss faced by Mohit?

- Ans**
- ✓ 1.  $16\frac{2}{3}\%$
  - ✗ 2.  $18\frac{1}{3}\%$
  - ✗ 3. 20%
  - ✗ 4. 15%

Question ID : 264330155710

Option 1 ID : 264330610244

Option 2 ID : 264330610245

Option 3 ID : 264330610246

Option 4 ID : 264330610243

Status : Answered

Chosen Option : 1

**Q.20** A bank offers compound interest at the rate 5% per annum calculated half yearly on its deposits. A customer deposits ₹2,400 each on 1st January and 1st July of a year. Find the amount he received at the end of the year.

- Ans**
- ✗ 1. ₹180.50
  - ✓ 2. ₹4,981.50
  - ✗ 3. ₹181.50
  - ✗ 4. ₹4,081.50

Question ID : 264330153851

Option 1 ID : 264330602867

Option 2 ID : 264330602869

Option 3 ID : 264330602868

Option 4 ID : 264330602870

Status : Not Answered

Chosen Option : --

Section : Reasoning Ability and Problem Solving

Q.1 Which figure should replace the question mark (?) if the following figure series were to be continued?

A	□	□	A	E	D	D	E	
	E	3	C	E	□	C	A	□
C	D		D	3	A	8	8	C

?

Ans

✗ 1.

□		8
	E	D
A	☆	

✗ 2.

☆		8
	E	C
A	□	

✓ 3.

□		8
	D	A
E	☆	

✗ 4.

□		☆
	D	A
C	8	

Question ID : 264330154766

Option 1 ID : 264330606528

Option 2 ID : 264330606529

Option 3 ID : 264330606530

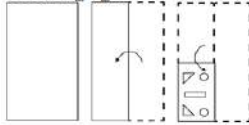
Option 4 ID : 264330606527

Status : Not Answered

Chosen Option : --

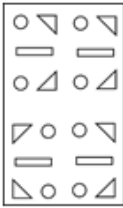


**Q.2** The sequence of folding a piece of paper and the manner in which the folded paper is cut is shown in the following figures. How would this paper look when unfolded?

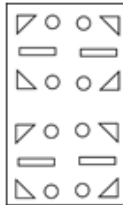


**Ans**

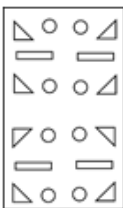
1.



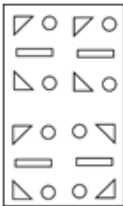
2.



3.



4.



Question ID : 264330155611

Option 1 ID : 264330609848

Option 2 ID : 264330609850

Option 3 ID : 264330609849

Option 4 ID : 264330609847

Status : Not Answered

Chosen Option : --

**Q.3** In a certain code language, 'DROP' is coded as '9375' and 'POND' is coded as '7839'. What is the code for 'N' in the given code language?

1. 3

2. 7

3. 8

4. 9

Question ID : 264330151710

Option 1 ID : 264330594467

Option 2 ID : 264330594468

Option 3 ID : 264330594470

Option 4 ID : 264330594469

Status : Not Answered

Chosen Option : --

**Q.4** 2 is related to 5 following a certain logic. Following the same logic, 6 is related to 37. To which of the following is 9 related to, following the same logic?

- Ans**
- 1. 81
  - 2. 83
  - 3. 82
  - 4. 84

Question ID : 264330151595  
Option 1 ID : 264330594007  
Option 2 ID : 264330594009  
Option 3 ID : 264330594008  
Option 4 ID : 264330594010  
Status : Answered  
Chosen Option : 3

**Q.5** If 4 December 1987 is a Friday, then what will be the day of the week on 12 December 2009?

- Ans**
- 1. Sunday
  - 2. Friday
  - 3. Wednesday
  - 4. Saturday

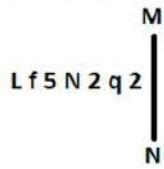
Question ID : 264330154357  
Option 1 ID : 264330604894  
Option 2 ID : 264330604892  
Option 3 ID : 264330604891  
Option 4 ID : 264330604893  
Status : Not Answered  
Chosen Option : --

**Q.6** Ranjan, Pari, Yash, Charu, Reetu and Gunjan are sitting around a circular table facing the centre. Ranjan sits 3rd to the left of Pari. Yash sits 2nd to the left of Ranjan. Charu sits 2nd to the right of Ranjan. Reetu is an immediate neighbour of Charu. Who sits 2nd to the right of Pari?

- Ans**
- 1. Yash
  - 2. Reetu
  - 3. Gunjan
  - 4. Charu

Question ID : 264330155655  
Option 1 ID : 264330610025  
Option 2 ID : 264330610024  
Option 3 ID : 264330610023  
Option 4 ID : 264330610026  
Status : Not Answered  
Chosen Option : --

Q.7 Select the correct mirror image of the given figure when the mirror is placed at MN as shown below.



- Ans
- 1.  $\Sigma p 2 N 5 \uparrow J$
  - 2.  $q 2 \Sigma N \uparrow L$
  - 3.  $\Sigma p \Sigma N \uparrow J$
  - 4.  $\Sigma p \uparrow N \uparrow f J$

Question ID : 264330151522

Option 1 ID : 264330593715

Option 2 ID : 264330593716

Option 3 ID : 264330593717

Option 4 ID : 264330593718

Status : Answered

Chosen Option : 3

Q.8 What should come in place of '?' in the given series?

8 27 84 255 768 ?

- Ans
- 1. 2235
  - 2. 2297
  - 3. 2307
  - 4. 2271

Question ID : 264330151497

Option 1 ID : 264330593615

Option 2 ID : 264330593617

Option 3 ID : 264330593618

Option 4 ID : 264330593616

Status : Not Answered

Chosen Option : --

Q.9 Read the given statement(s) and conclusions carefully. Assuming that the information given in the statements is true, even if it appears to be at variance with commonly known facts, decide which of the given conclusions logically follow(s) from the statement(s).

Statements: Some cows are crows. Some crows are elephants.

Conclusions:

(I) Some cows are elephants.

(II) All crows are elephants.

- Ans
- 1. Only conclusion (I) is follows.
  - 2. Neither conclusion (I) nor (II) is follows.
  - 3. Only conclusion (II) is follows.
  - 4. Both conclusions (I) and (II) are follows.

Question ID : 264330154426

Option 1 ID : 264330605167

Option 2 ID : 264330605169

Option 3 ID : 264330605168

Option 4 ID : 264330605170

Status : Answered

Chosen Option : 2

Q.10 What should come in place of ? in the given series?

108 103 98 93 88 ?

- Ans
- 1. 82
  - 2. 83
  - 3. 84
  - 4. 81

Question ID : 264330151550  
Option 1 ID : 264330593828  
Option 2 ID : 264330593829  
Option 3 ID : 264330593830  
Option 4 ID : 264330593827  
Status : Answered  
Chosen Option : 2

Q.11 If 'A' stands for '+', 'B' stands for '×', 'C' stands for '÷' and 'D' stands for '-', what will come in place of the question mark (?) in the following equation?  
 $27 B 3 C (54 A 2) B 5 D 55 = ?$

- Ans
- 1. 161
  - 2. 167
  - 3. 153
  - 4. 159

Question ID : 264330151787  
Option 1 ID : 264330594775  
Option 2 ID : 264330594778  
Option 3 ID : 264330594776  
Option 4 ID : 264330594777  
Status : Answered  
Chosen Option : 1

Q.12 What should come in place of ? in the given series?

227 226 218 191 127 ?

- Ans
- 1. 3
  - 2. 4
  - 3. 2
  - 4. 1

Question ID : 264330151559  
Option 1 ID : 264330593865  
Option 2 ID : 264330593866  
Option 3 ID : 264330593864  
Option 4 ID : 264330593863  
Status : Answered  
Chosen Option : 3

**Q.13** PD 17, TH 19 से एक निश्चित प्रकार से संबंधित है। उसी प्रकार, HK 23, LO 29 से संबंधित है। समान तर्क का अनुसरण करते हुए FJ 11 निम्नलिखित में से किससे संबंधित है?

- Ans**
- 1. IM 13
  - 2. HL 17
  - 3. IN 15
  - 4. JN 13

Question ID : 264330151673  
Option 1 ID : 264330594322  
Option 2 ID : 264330594321  
Option 3 ID : 264330594320  
Option 4 ID : 264330594319  
Status : Not Answered  
Chosen Option : --

**Q.14** What should come in place of ? in the given series based on the English alphabetical order?

BPR, FRV, JTZ, NVD, ?

- Ans**
- 1. QYG
  - 2. SXI
  - 3. QXG
  - 4. RXH

Question ID : 264330155780  
Option 1 ID : 264330610525  
Option 2 ID : 264330610523  
Option 3 ID : 264330610524  
Option 4 ID : 264330610526  
Status : Answered  
Chosen Option : 4

**Q.15** What should come in place of ? in the given series based on the English alphabetical order?

ZKP, DHR, HET, LBV, ?

- Ans**
- 1. PYX
  - 2. QZY
  - 3. RYX
  - 4. QYZ

Question ID : 264330155802  
Option 1 ID : 264330610612  
Option 2 ID : 264330610611  
Option 3 ID : 264330610613  
Option 4 ID : 264330610614  
Status : Not Answered  
Chosen Option : --

**Q.16** Select the set in which the numbers are related in the same way as are the numbers of the following sets.  
 (NOTE: Operations should be performed on the whole numbers, without breaking down the numbers into its constituent digits. E.g. 13 – Operations on 13 such as adding / subtracting / multiplying etc. to 13 can be performed. Breaking down 13 into 1 and 3 and then performing mathematical operations on 1 and 3 is not allowed)  
 (32, 99, 67)  
 (22, 77, 55)

- Ans**
- 1. 53, 98, 33
  - 2. 23, 87, 64
  - 3. 35, 87, 12
  - 4. 12, 45, 14

Question ID : 264330151613  
 Option 1 ID : 264330594082  
 Option 2 ID : 264330594080  
 Option 3 ID : 264330594081  
 Option 4 ID : 264330594079  
 Status : Answered  
 Chosen Option : 2

**Q.17** Read the given statements and conclusions carefully. You have to take the given statements to be true even if they seem to be at variance from commonly known facts. You have to decide which conclusion/s logically follow/s from the given statements.

Statements: Some alphabets are chairs. Some chairs are high. All high are buildings.

Conclusion I: Some alphabets are buildings.

Conclusion II: Some high are buildings.

- Ans**
- 1. Only conclusion (II) is follow.
  - 2. Only conclusion (I) is follow.
  - 3. Both conclusions (I) and (II) are follow.
  - 4. Neither conclusion (I) nor (II) is follow.

Question ID : 264330155924  
 Option 1 ID : 264330611100  
 Option 2 ID : 264330611099  
 Option 3 ID : 264330611102  
 Option 4 ID : 264330611101  
 Status : Answered  
 Chosen Option : 1

**Q.18** What should come in place of ? in the given series based on the English alphabetical order?

JVC, LXD, NZE, PBF, ?

- Ans**
- 1. QCF
  - 2. RDG
  - 3. SCH
  - 4. QDH

Question ID : 264330155772  
 Option 1 ID : 264330610491  
 Option 2 ID : 264330610492  
 Option 3 ID : 264330610494  
 Option 4 ID : 264330610493  
 Status : Answered  
 Chosen Option : 2

**Q.19** In a certain code language, 'CRAFT' is coded as 'DSBGU' and 'FRIDAY' is coded as 'GSJEBZ'. What is the code for 'MANGO' in the given code language?

- Ans**
- 1. NBOHP
  - 2. MBPGQ
  - 3. NCOGQ
  - 4. MCOGP

Question ID : **264330155811**  
 Option 1 ID : **264330610650**  
 Option 2 ID : **264330610648**  
 Option 3 ID : **264330610647**  
 Option 4 ID : **264330610649**  
 Status : **Answered**  
 Chosen Option : **1**

**Q.20** What will come in the place of '?' in the following equation, if '+' and '-' are interchanged and '×' and '÷' are interchanged?  
 $83 + 17 \div 4 - 64 \times 16 = ?$

- Ans**
- 1. 29
  - 2. 9
  - 3. 19
  - 4. 18

Question ID : **264330155670**  
 Option 1 ID : **264330610084**  
 Option 2 ID : **264330610086**  
 Option 3 ID : **264330610085**  
 Option 4 ID : **264330610083**  
 Status : **Answered**  
 Chosen Option : **3**

Section : **General Awareness**

**Q.1** How many countries participated in the FIFA U-17 Women's World Cup 2022?

- Ans**
- 1. 18
  - 2. 14
  - 3. 16
  - 4. 12

Question ID : **264330158227**  
 Option 1 ID : **264330620270**  
 Option 2 ID : **264330620268**  
 Option 3 ID : **264330620269**  
 Option 4 ID : **264330620267**  
 Status : **Not Answered**  
 Chosen Option : **--**

Q.2 'Wings of Fire' is the autobiography of a former president of India. Who is he?

- Ans  1. Shankar Dayal Sharma  
 2. APJ Abdul Kalam  
 3. Zakir Hussain  
 4. VV Giri

Question ID : 264330160963  
Option 1 ID : 264330631186  
Option 2 ID : 264330631184  
Option 3 ID : 264330631183  
Option 4 ID : 264330631185  
Status : Answered  
Chosen Option : 2

Q.3 In which of the following states is the Statue of Unity situated?

- Ans  1. Gujarat  
 2. Rajasthan  
 3. Maharashtra  
 4. Punjab

Question ID : 264330160774  
Option 1 ID : 264330630428  
Option 2 ID : 264330630429  
Option 3 ID : 264330630430  
Option 4 ID : 264330630427  
Status : Answered  
Chosen Option : 1

Q.4 When was the Defence of India Act enacted?

- Ans  1. 1920  
 2. 1918  
 3. 1915  
 4. 1921

Question ID : 264330160878  
Option 1 ID : 264330630845  
Option 2 ID : 264330630844  
Option 3 ID : 264330630843  
Option 4 ID : 264330630846  
Status : Not Answered  
Chosen Option : --

Q.5 Which festival brings out the fusion rich culture of Chhattisgarh and Odisha?

- Ans  1. Rath Yatra  
 2. Bastar Goncha  
 3. Shoolini fair  
 4. Madhavpur fair

Question ID : 264330159083  
Option 1 ID : 264330623693  
Option 2 ID : 264330623692  
Option 3 ID : 264330623691  
Option 4 ID : 264330623694  
Status : Not Answered  
Chosen Option : --



Q.6 Which flag of the Indian National Congress was adopted in 1931?

- Ans  1. A two colour flag with charkha made by cloth  
 2. A tricolour flag made by Khadi with a Charkha symbol  
 3. One colour flag with charkha symbol  
 4. A blue colour flag made by cloth

Question ID : 264330160880  
Option 1 ID : 264330630854  
Option 2 ID : 264330630853  
Option 3 ID : 264330630851  
Option 4 ID : 264330630852  
Status : Answered  
Chosen Option : 2

Q.7 Among the following pairs, which ones denote two scalar quantities?

- Ans  1. Momentum and Angular velocity  
 2. Distance and Speed  
 3. Linear momentum and Acceleration  
 4. Electric field and Force

Question ID : 264330157781  
Option 1 ID : 264330618484  
Option 2 ID : 264330618486  
Option 3 ID : 264330618483  
Option 4 ID : 264330618485  
Status : Answered  
Chosen Option : 4

Q.8 Which of the following music directors won the Oscar award in the year 2009?

- Ans  1. Bappi Lahiri  
 2. AR Rahman  
 3. Vishal Bhardwaj  
 4. Rajesh Roshan

Question ID : 264330155503  
Option 1 ID : 264330609417  
Option 2 ID : 264330609415  
Option 3 ID : 264330609418  
Option 4 ID : 264330609416  
Status : Answered  
Chosen Option : 2

**Q.9** Which of the following vitamins prevents major birth defects of the brain and spine of a newborn baby?

- Ans
- 1. Vitamin E
  - 2. Vitamin A
  - 3. Vitamin C
  - 4. Folic acid

Question ID : 264330156611  
Option 1 ID : 264330613833  
Option 2 ID : 264330613831  
Option 3 ID : 264330613832  
Option 4 ID : 264330613834  
Status : Not Answered  
Chosen Option : --

**Q.10** In India, the National Sports Day is celebrated on which date?

- Ans
- 1. 6th December
  - 2. 29th August
  - 3. 1st September
  - 4. 14th November

Question ID : 264330158233  
Option 1 ID : 264330620294  
Option 2 ID : 264330620291  
Option 3 ID : 264330620292  
Option 4 ID : 264330620293  
Status : Not Answered  
Chosen Option : --

**Q.11** Who among the following was the founding member of Sri Sai Nataraja Academy of Kuchipudi that offers training and higher studies in Kuchipudi?

- Ans
- 1. P Ramadevi
  - 2. Kaushalya Reddy
  - 3. Yamini Krishnamurthy
  - 4. Aparna Satheesan

Question ID : 264330155483  
Option 1 ID : 264330609337  
Option 2 ID : 264330609336  
Option 3 ID : 264330609335  
Option 4 ID : 264330609338  
Status : Answered  
Chosen Option : 2

Q.12 Which of the following playback singers of India received the Padma Shri in 2009 and Padma Bhushan in 2016?

- Ans
- 1. Sonu Nigam
  - 2. Abhijit Bhattacharya
  - 3. Kumar Sanu Bhattacharjee
  - 4. Udit Narayan Jha

Question ID : 264330161769  
Option 1 ID : 264330634406  
Option 2 ID : 264330634403  
Option 3 ID : 264330634404  
Option 4 ID : 264330634405  
Status : Answered  
Chosen Option : 3

Q.13 When the 'trans-boundary economic activities' of an economy and depreciation are included into account, the aggregate measure is known as \_\_\_\_\_.

- Ans
- 1. GNP
  - 2. NNP
  - 3. PCI
  - 4. GDP

Question ID : 264330166033  
Option 1 ID : 264330651207  
Option 2 ID : 264330651209  
Option 3 ID : 264330651210  
Option 4 ID : 264330651208  
Status : Answered  
Chosen Option : 1

Q.14 Tamil Nadu's \_\_\_\_\_ marked a national record in men's long jump in the second AFI National Jumps Competition in March 2023.

- Ans
- 1. Suresh Babu
  - 2. Anees Yahiya
  - 3. Murali Sreeshankar
  - 4. Jeswin Aldrin

Question ID : 264330161440  
Option 1 ID : 264330633090  
Option 2 ID : 264330633089  
Option 3 ID : 264330633087  
Option 4 ID : 264330633088  
Status : Not Answered  
Chosen Option : --

Q.15 वसंत ऋतु के आगमन पर \_\_\_\_\_ गांव 'बागुरुम्बा (Bagurumba)' के मधुर गायन से झूम उठता है।

- Ans  1. बोडो (Bodo)  
 2. खासी (Khasi)  
 3. गारो (Garo)  
 4. कार्बी (Karbi)

Question ID : 264330160796  
Option 1 ID : 264330630516  
Option 2 ID : 264330630515  
Option 3 ID : 264330630517  
Option 4 ID : 264330630518  
Status : Not Answered  
Chosen Option : --

Q.16 Which mountain range from the following is associated with Rajasthan state?

- Ans  1. Satpura Range  
 2. Sahyadri Range  
 3. Aravalli Range  
 4. Vindhya Range

Question ID : 264330161530  
Option 1 ID : 264330633447  
Option 2 ID : 264330633450  
Option 3 ID : 264330633448  
Option 4 ID : 264330633449  
Status : Answered  
Chosen Option : 3

Q.17 According to the National Multidimensional Poverty Index 2021, which state has the lowest percentage of population being multidimensionally poor?

- Ans  1. Kerala  
 2. Uttar Pradesh  
 3. Madhya Pradesh  
 4. Rajasthan

Question ID : 264330160169  
Option 1 ID : 264330628018  
Option 2 ID : 264330628017  
Option 3 ID : 264330628015  
Option 4 ID : 264330628016  
Status : Answered  
Chosen Option : 3

Q.18 Which of the following represents disposable income?

- Ans  1. The income earned by individuals and households after taxes and other deductions  
 2. The total income earned by businesses and corporations in an economy  
 3. The income earned by individuals through their own business or self-employment  
 4. The total income earned by individuals and households before taxes and other deductions

Question ID : 264330157319  
Option 1 ID : 264330616641  
Option 2 ID : 264330616639  
Option 3 ID : 264330616642  
Option 4 ID : 264330616640  
Status : Not Answered  
Chosen Option : --

Q.19 Which of the following states receives rainfall during the winter season?

- Ans  1. Tamil Nadu  
 2. Jharkhand  
 3. Maharashtra  
 4. Rajasthan

Question ID : 264330161308  
Option 1 ID : 264330632562  
Option 2 ID : 264330632559  
Option 3 ID : 264330632561  
Option 4 ID : 264330632560  
Status : Answered  
Chosen Option : 1

Q.20 Who among the following is the author of the book 'Revolution 2020'?

- Ans  1. Chetan Bhagat  
 2. Omair Ahmad  
 3. Siddhartha Sarma  
 4. Joy Goswami

Question ID : 264330155459  
Option 1 ID : 264330609239  
Option 2 ID : 264330609240  
Option 3 ID : 264330609241  
Option 4 ID : 264330609242  
Status : Answered  
Chosen Option : 3

Q.21 Who was our first Prime Minister?

- Ans  1. Rajendra Prasad  
 2. Indira Gandhi  
 3. Jawaharlal Nehru  
 4. Gulzarilal Nanda

Question ID : 264330159912  
Option 1 ID : 264330626996  
Option 2 ID : 264330626995  
Option 3 ID : 264330626997  
Option 4 ID : 264330626998  
Status : Answered  
Chosen Option : 3

Q.22 Which state is ranked fourth in India according to the first Multidimensional Poverty Index (MPI) 2021 report of the NITI Aayog?

- Ans  1. Meghalaya  
 2. Madhya Pradesh  
 3. Assam  
 4. Himachal Pradesh

Question ID : 264330166020  
Option 1 ID : 264330651156  
Option 2 ID : 264330651157  
Option 3 ID : 264330651155  
Option 4 ID : 264330651158  
Status : Not Answered  
Chosen Option : --

Q.23 Which Schedule of the Indian Constitution deals with the division of powers between the Union and the states?

- Ans
- 1. 9<sup>th</sup>
  - 2. 7<sup>th</sup>
  - 3. 5<sup>th</sup>
  - 4. 2<sup>nd</sup>

Question ID : 264330159896  
Option 1 ID : 264330626934  
Option 2 ID : 264330626933  
Option 3 ID : 264330626932  
Option 4 ID : 264330626931  
Status : Not Answered  
Chosen Option : --

Q.24 पथ या सड़क विक्रेताओं (street vendors) के वित्तीय समावेशन के लिए भारत सरकार द्वारा शुरू की गई योजना का नाम क्या है, जिसकी वर्षगांठ का समारोह 9 जुलाई से 31 जुलाई 2022 तक आयोजित किया गया था?

- Ans
- 1. पीएम आवासनिधि योजना (PM AVASNidhi Scheme)
  - 2. पीएम स्वाधीन योजना (PM SVAdhin Scheme)
  - 3. पीएम स्वनिधि योजना (PM SVANidhi Scheme)
  - 4. पीएम स्वाधार योजना (PM SVAdhar Scheme)

Question ID : 264330161411  
Option 1 ID : 264330632971  
Option 2 ID : 264330632973  
Option 3 ID : 264330632972  
Option 4 ID : 264330632974  
Status : Not Answered  
Chosen Option : --

Q.25 Renowned \_\_\_\_\_ folk dance artist Domar Singh Kunwar, who has dedicated his life to preserving the tradition of the dance for over five decades, was awarded the Padma Shri 2023.

- Ans
- 1. Pandwani
  - 2. Raut Nacha
  - 3. Natya Nacha
  - 4. Soowa

Question ID : 264330160803  
Option 1 ID : 264330630544  
Option 2 ID : 264330630545  
Option 3 ID : 264330630543  
Option 4 ID : 264330630546  
Status : Not Answered  
Chosen Option : --

**Q.1** Select the most appropriate meaning of the given idiom.  
**Beat around the bush**

- Ans**  1. To avoid talking about what is important  
 2. To talk about important things  
 3. To have patience  
 4. To avoid people

Question ID : 264330152723  
Option 1 ID : 264330598494  
Option 2 ID : 264330598493  
Option 3 ID : 264330598491  
Option 4 ID : 264330598492  
Status : Answered  
Chosen Option : 1

**Q.2** Select the option that can be used as a one-word substitute for the given group of words.  
**A person who is kept captive for fulfilment of demands of money or conditions.**

- Ans**  1. Doyen  
 2. Bait  
 3. Hostage  
 4. Scion

Question ID : 264330151811  
Option 1 ID : 264330594873  
Option 2 ID : 264330594871  
Option 3 ID : 264330594874  
Option 4 ID : 264330594872  
Status : Not Answered  
Chosen Option : --

**Q.3** Select the most appropriate synonym of the given word.  
**Peril**

- Ans**  1. Danger  
 2. Entertainment  
 3. Joke  
 4. Ignorance

Question ID : 264330152748  
Option 1 ID : 264330598593  
Option 2 ID : 264330598592  
Option 3 ID : 264330598591  
Option 4 ID : 264330598594  
Status : Answered  
Chosen Option : 1

**Q.4** There is a spelling error in the given sentence. Select the option that contains the **INCORRECTLY** spelt word.

As per manager's opinion, the laser sprinkler malfunctioned.

Ans  1. malfunctioned

2. sprinkler

3. laser

4. opinion

Question ID : 264330152840

Option 1 ID : 264330598954

Option 2 ID : 264330598953

Option 3 ID : 264330598952

Option 4 ID : 264330598951

Status : Answered

Chosen Option : 1

**Q.5** Select the most appropriate **ANTONYM** of the given word.

Amiable

Ans  1. Restless

2. Unfriendly

3. Sad

4. Joyful

Question ID : 264330151914

Option 1 ID : 264330595273

Option 2 ID : 264330595271

Option 3 ID : 264330595272

Option 4 ID : 264330595274

Status : Answered

Chosen Option : 2

**Q.6** Select the most appropriate idiom to fill in the blank.

Rahul speaks easily in front of a small group, but he seems \_\_\_\_\_ before a large audience.

Ans  1. ill at ease

2. think ill of

3. man of ill repute

4. ill-disposed to

Question ID : 264330153103

Option 1 ID : 264330599977

Option 2 ID : 264330599976

Option 3 ID : 264330599975

Option 4 ID : 264330599978

Status : Not Answered

Chosen Option : --



**Q.7** Select the most appropriate idiom for the following sentence.  
He made the business profitable from unprofitable in about a year of joining.

- Ans
- 1. Easy come, easy go
  - 2. Throw up
  - 3. Where there is a will, there is a way
  - 4. Still waters run deep

Question ID : 264330141304  
Option 1 ID : 264330553551  
Option 2 ID : 264330553552  
Option 3 ID : 264330553554  
Option 4 ID : 264330553553  
Status : Answered  
Chosen Option : 3

**Q.8** Parts of the following sentence have been underlined and given as options. Select the option that contains a misspelt word.  
Obesity is rapidly becoming the leading cause of prevantable deaths in the United States.

- Ans
- 1. rapidly
  - 2. leading
  - 3. obesity
  - 4. prevantable

Question ID : 264330151837  
Option 1 ID : 264330594976  
Option 2 ID : 264330594977  
Option 3 ID : 264330594975  
Option 4 ID : 264330594978  
Status : Answered  
Chosen Option : 4

**Q.9** Identify and correct the INCORRECTLY spelt word in the given sentence.  
Sliding each bead from one side to the other, the student used the abacus to count out the number of days in a week.

- Ans
- 1. beed
  - 2. number
  - 3. Slaiding
  - 4. abacuss

Question ID : 264330153598  
Option 1 ID : 264330601880  
Option 2 ID : 264330601882  
Option 3 ID : 264330601879  
Option 4 ID : 264330601881  
Status : Answered  
Chosen Option : 2

**Q.10** Select the most appropriate option that can substitute the underlined segment in the given sentence. If there is no need to substitute it, select 'No improvement required'.  
Very early in the morning, at the beginning of January, Opu was lying in bed waiting for the sun having rose.

- Ans**
- 1. waited for the sun rising
  - 2. waited for the sun having rose
  - 3. No improvement required
  - 4. waiting for the sun to rise

Question ID : 264330152669  
Option 1 ID : 264330598281  
Option 2 ID : 264330598279  
Option 3 ID : 264330598282  
Option 4 ID : 264330598280  
Status : Answered  
Chosen Option : 4

**Q.11** Choose the sentence that contains an error.

- Ans**
- 1. I love the taste of fresh strawberries in the summer.
  - 2. She is the winner of the Nobel Peace Prize.
  - 3. He is chef who specialises in Italian cuisine.
  - 4. The Earth revolves around the Sun.

Question ID : 264330155181  
Option 1 ID : 264330608184  
Option 2 ID : 264330608185  
Option 3 ID : 264330608186  
Option 4 ID : 264330608183  
Status : Answered  
Chosen Option : 3

**Q.12** Select the most appropriate option that can substitute the underlined segment in the given sentence. If there is no need to substitute it, select 'No improvement required'.  
Newton, after seeing the apple falling from a tree, began to wonder whether if it moved towards the earth and not upwards towards the sky.

- Ans**
- 1. No improvement required
  - 2. began to wondering if
  - 3. began his wondering how
  - 4. began to wonder why

Question ID : 264330152668  
Option 1 ID : 264330598278  
Option 2 ID : 264330598276  
Option 3 ID : 264330598277  
Option 4 ID : 264330598275  
Status : Answered  
Chosen Option : 4

**Q.13** Select the most appropriate option that can substitute the underlined word in the following sentence.

They serve stuffed garlic bread and molten chocolate in the birthday party of their son, Parth, last week.

- Ans**
- 1. served
  - 2. serves
  - 3. are serving
  - 4. be served

Question ID : 264330152576  
Option 1 ID : 264330597909  
Option 2 ID : 264330597907  
Option 3 ID : 264330597910  
Option 4 ID : 264330597908  
Status : Answered  
Chosen Option : 1

**Q.14** Select the most appropriate synonym of the given word.  
Barbed

- Ans**
- 1. Passive
  - 2. Kind
  - 3. Gentle
  - 4. Spiteful

Question ID : 264330151880  
Option 1 ID : 264330595142  
Option 2 ID : 264330595139  
Option 3 ID : 264330595141  
Option 4 ID : 264330595140  
Status : Answered  
Chosen Option : 4

**Q.15** Select the most appropriate meaning of the underlined segment in the given sentence.  
I can't believe you let the cat out of the bag about my surprise party!

- Ans**
- 1. Ask a question
  - 2. Reveal a secret
  - 3. Keep a secret
  - 4. Make a joke

Question ID : 264330152684  
Option 1 ID : 264330598342  
Option 2 ID : 264330598340  
Option 3 ID : 264330598339  
Option 4 ID : 264330598341  
Status : Answered  
Chosen Option : 2

**Q.16** Select the option that can be used as a one-word substitute for the given group of words.

Endless period of time

- Ans  1. Eternity  
 2. Longevity  
 3. Impurity  
 4. Frailty

Question ID : 264330153639  
Option 1 ID : 264330602030  
Option 2 ID : 264330602029  
Option 3 ID : 264330602028  
Option 4 ID : 264330602027  
Status : Answered  
Chosen Option : 1

**Q.17** Parts of the given sentence have been underlined. One of them contains an error. The underlined parts are given as options with some changes. Select the option that correctly rectifies the error.

Sohan is the older brother of my best friend.

- Ans  1. to my  
 2. an  
 3. elder  
 4. good

Question ID : 264330153173  
Option 1 ID : 264330600253  
Option 2 ID : 264330600251  
Option 3 ID : 264330600252  
Option 4 ID : 264330600254  
Status : Answered  
Chosen Option : 3

**Q.18** Parts of the following sentence have been underlined and given as options. Select the option that contains an error.

We think of the past history of the world as fixed but of the future as undecided and open to a wealth off possibilities.

- Ans  1. of the past  
 2. as undecided  
 3. as fixed  
 4. wealth off

Question ID : 264330153203  
Option 1 ID : 264330600371  
Option 2 ID : 264330600374  
Option 3 ID : 264330600372  
Option 4 ID : 264330600373  
Status : Answered  
Chosen Option : 4

Q.19 Parts of the following sentence have been given as options. Select the option that contains an error.

My teacher told me that / all that / glitters was not gold.

- Ans
- 1. My teacher told me that
  - 2. all that
  - 3. glitters was not gold
  - 4. No error

Question ID : 264330155378  
Option 1 ID : 264330608927  
Option 2 ID : 264330608928  
Option 3 ID : 264330608929  
Option 4 ID : 264330608930  
Status : Answered  
Chosen Option : 3

Q.20 Parts of the following sentence have been underlined and given as options. Select the option that contains an error.

When I bought the book, I thought it will be interesting.

- Ans
- 1. When
  - 2. bought
  - 3. will
  - 4. thought

Question ID : 264330153190  
Option 1 ID : 264330600319  
Option 2 ID : 264330600320  
Option 3 ID : 264330600322  
Option 4 ID : 264330600321  
Status : Answered  
Chosen Option : 2

### Comprehension:

In the following passage, some words have been deleted. Read the passage carefully and select the most appropriate option to fill in each blank.

Education should be free to all because it is a (1)\_\_\_ human right. It is essential for the (2)\_\_\_ of a fully functioning society and for the advancement of humanity. While some argue that education should not be free because it has value or that free education would be a (3)\_\_\_ on taxpayers, the reality is that education is a public good that (4)\_\_\_ everyone in society. Not only does education provide individuals with the skills and knowledge they need to participate in the workforce, but it also improves social cohesion and creates more (5)\_\_\_ citizens.

### SubQuestion No : 21

Q.21 Select the most appropriate option to fill in blank number 1.

- Ans
- 1. lovely
  - 2. precious
  - 3. fundamental
  - 4. joyful

Question ID : 264330153569  
Option 1 ID : 264330601771  
Option 2 ID : 264330601772  
Option 3 ID : 264330601773  
Option 4 ID : 264330601774  
Status : Answered  
Chosen Option : 3

**Comprehension:**

In the following passage, some words have been deleted. Read the passage carefully and select the most appropriate option to fill in each blank.

Education should be free to all because it is a (1)\_\_ human right. It is essential for the (2)\_\_ of a fully functioning society and for the advancement of humanity. While some argue that education should not be free because it has value or that free education would be a (3)\_\_ on taxpayers, the reality is that education is a public good that (4)\_\_ everyone in society. Not only does education provide individuals with the skills and knowledge they need to participate in the workforce, but it also improves social cohesion and creates more (5)\_\_ citizens.

**SubQuestion No : 22**

**Q.22** Select the most appropriate option to fill in blank number 2.

- Ans  1. celebration  
 2. development  
 3. enthusiasm  
 4. distribution

Question ID : 264330153570

Option 1 ID : 264330601775

Option 2 ID : 264330601776

Option 3 ID : 264330601778

Option 4 ID : 264330601777

Status : Answered

Chosen Option : 2

**Comprehension:**

In the following passage, some words have been deleted. Read the passage carefully and select the most appropriate option to fill in each blank.

Education should be free to all because it is a (1)\_\_ human right. It is essential for the (2)\_\_ of a fully functioning society and for the advancement of humanity. While some argue that education should not be free because it has value or that free education would be a (3)\_\_ on taxpayers, the reality is that education is a public good that (4)\_\_ everyone in society. Not only does education provide individuals with the skills and knowledge they need to participate in the workforce, but it also improves social cohesion and creates more (5)\_\_ citizens.

**SubQuestion No : 23**

**Q.23** Select the most appropriate option to fill in blank number 3.

- Ans  1. focus  
 2. contentment  
 3. burden  
 4. blessing

Question ID : 264330153571

Option 1 ID : 264330601780

Option 2 ID : 264330601781

Option 3 ID : 264330601782

Option 4 ID : 264330601779

Status : Not Answered

Chosen Option : --

**Comprehension:**

In the following passage, some words have been deleted. Read the passage carefully and select the most appropriate option to fill in each blank.

Education should be free to all because it is a (1)\_\_ human right. It is essential for the (2)\_\_ of a fully functioning society and for the advancement of humanity. While some argue that education should not be free because it has value or that free education would be a (3)\_\_ on taxpayers, the reality is that education is a public good that (4)\_\_ everyone in society. Not only does education provide individuals with the skills and knowledge they need to participate in the workforce, but it also improves social cohesion and creates more (5)\_\_ citizens.

**SubQuestion No : 24**

**Q.24** Select the most appropriate option to fill in blank number 4.

- Ans  1. sections  
 2. emphasises  
 3. burdens  
 4. benefits

Question ID : 264330153572

Option 1 ID : 264330601783

Option 2 ID : 264330601784

Option 3 ID : 264330601785

Option 4 ID : 264330601786

Status : Answered

Chosen Option : 4

**Comprehension:**

In the following passage, some words have been deleted. Read the passage carefully and select the most appropriate option to fill in each blank.

Education should be free to all because it is a (1)\_\_ human right. It is essential for the (2)\_\_ of a fully functioning society and for the advancement of humanity. While some argue that education should not be free because it has value or that free education would be a (3)\_\_ on taxpayers, the reality is that education is a public good that (4)\_\_ everyone in society. Not only does education provide individuals with the skills and knowledge they need to participate in the workforce, but it also improves social cohesion and creates more (5)\_\_ citizens.

**SubQuestion No : 25**

**Q.25** Select the most appropriate option to fill in blank number 5.

- Ans  1. easy going  
 2. apprehensive  
 3. productive  
 4. authentic

Question ID : 264330153573

Option 1 ID : 264330601790

Option 2 ID : 264330601787

Option 3 ID : 264330601789

Option 4 ID : 264330601788

Status : Answered

Chosen Option : 4

## SSC MTS 2023 Tier 1 Sept 12 Shift 3 Question Paper with Answers

Roll Number	
Candidate Name	
Exam Date	12/09/2023
Exam Time	4:00 PM - 6:00 PM
Subject	MTS Non Tech Havaladar CBIC and CBN Examination 2023

## Section : Numerical and Mathematical Ability

**Q.1** A seller marked the price of a sofa 25% more than its cost price. If he allows 12% discount on the marked price to the customer, then what is his gain percentage? If the cost price of the sofa is ₹15,000, then what is his gain money?

- Ans**
- 1. 9%; ₹1,480
  - 2. 8%; ₹1,350
  - 3. 10%; ₹1,500
  - 4. 9.5%; ₹1,600

Question ID : 264330156183

Option 1 ID : 264330612133

Option 2 ID : 264330612131

Option 3 ID : 264330612134

Option 4 ID : 264330612132

Status : Not Attempted and  
Marked For Review

Chosen Option : --

**Q.2** Lucknow Shatabdi Express leaves Varanasi at 3:30 p.m. and reaches Lucknow at 8:30 p.m. on the same day. The average speed of the train is 140 km/h. What is the distance (in km) from Varanasi to Lucknow?

- Ans**
- 1. 725
  - 2. 675
  - 3. 750
  - 4. 700

Question ID : 264330156230

Option 1 ID : 264330612320

Option 2 ID : 264330612322

Option 3 ID : 264330612319

Option 4 ID : 264330612321

Status : Answered

Chosen Option : 4



**Q.3** The time taken by a boat to cover a distance of  $x$  km upstream is double the time taken by the boat to cover the same distance downstream. The sum of the speeds of the boat and the stream is 90 km/h. The speed of the stream is \_\_\_\_ km/h.

- Ans**
- 1. 22.5
  - 2. 37.5
  - 3. 27.5
  - 4. 33.5

Question ID : 264330153813  
Option 1 ID : 264330602716  
Option 2 ID : 264330602717  
Option 3 ID : 264330602718  
Option 4 ID : 264330602715  
Status : Not Answered  
Chosen Option : --

**Q.4** Find the volume of a cuboid whose dimensions are 34 m, 7 m and 4 m.

- Ans**
- 1.  $952 \text{ m}^3$
  - 2.  $476 \text{ m}^3$
  - 3.  $238 \text{ m}^3$
  - 4.  $1904 \text{ m}^3$

Question ID : 264330153896  
Option 1 ID : 264330603048  
Option 2 ID : 264330603049  
Option 3 ID : 264330603050  
Option 4 ID : 264330603047  
Status : Answered  
Chosen Option : 1

**Q.5** What is the HCF of the polynomials  $(x^3 - 8)$ ,  $(x^3 - 6x^2 + 12x - 8)$  and  $(x^3 - 4x^2 + 4x)$ ?

- Ans**
- 1.  $(x - 1)$
  - 2.  $(x - 2)$
  - 3.  $(x - 8)$
  - 4.  $(x - 4)$

Question ID : 264330156204  
Option 1 ID : 264330612215  
Option 2 ID : 264330612216  
Option 3 ID : 264330612218  
Option 4 ID : 264330612217  
Status : Answered  
Chosen Option : 2

**Q.6** Aditya sold two bags for ₹630 each. On one bag he gains 33% and on the other he loses 33%. Find his gain or loss per cent on the whole transaction.

- Ans**
- 1. 12.37% gain
  - 2. 10.89% gain
  - 3. 10.89% loss
  - 4. 12.37% loss

Question ID : 264330155735

Option 1 ID : 264330610345

Option 2 ID : 264330610343

Option 3 ID : 264330610346

Option 4 ID : 264330610344

Status : Answered

Chosen Option : 3

**Q.7** In a subject, there are 40 marks for practical and 110 marks for theory. In another subject, the practical marks are 60 and the theory marks are 40. If R gets an average mark of 40 in practical and an average mark of 60 in theory, then his average marks per subject are \_\_\_\_\_.

- Ans**
- 1. 80
  - 2. 60
  - 3. 100
  - 4. 40

Question ID : 264330153799

Option 1 ID : 264330602661

Option 2 ID : 264330602660

Option 3 ID : 264330602659

Option 4 ID : 264330602662

Status : Not Answered

Chosen Option : --

**Q.8** If the average of 7,  $x$ , 13, 16 and 9 is 10, then the value of  $x$  is:

- Ans**
- 1. 4
  - 2. 6
  - 3. 8
  - 4. 5

Question ID : 264330155952

Option 1 ID : 264330611210

Option 2 ID : 264330611209

Option 3 ID : 264330611207

Option 4 ID : 264330611208

Status : Answered

Chosen Option : 4

**Q.9** The simple interest on a certain sum at 10% per annum for two years and three years differ by ₹500. Find the sum.

- Ans
- 1. ₹5,500
  - 2. ₹5,000
  - 3. ₹6,000
  - 4. ₹4,500

Question ID : 264330156560

Option 1 ID : 264330613629

Option 2 ID : 264330613628

Option 3 ID : 264330613630

Option 4 ID : 264330613627

Status : Answered

Chosen Option : 2

**Q.10** Find a single discount equivalent to a discount series of 10%, 15% and 20%.

- Ans
- 1. 39.20%
  - 2. 42.20%
  - 3. 38.80%
  - 4. 40.80%

Question ID : 264330156362

Option 1 ID : 264330612849

Option 2 ID : 264330612847

Option 3 ID : 264330612850

Option 4 ID : 264330612848

Status : Answered

Chosen Option : 3

**Q.11** A steel sphere of radius 1 cm is melted and cast into a wire of diameter 4 mm, then the length of the wire is:

- Ans
- 1.  $31\frac{1}{3}$  cm
  - 2.  $35\frac{1}{7}$  cm
  - 3.  $37\frac{1}{7}$  cm
  - 4.  $33\frac{1}{3}$  cm

Question ID : 264330154109

Option 1 ID : 264330603899

Option 2 ID : 264330603902

Option 3 ID : 264330603901

Option 4 ID : 264330603900

Status : Not Answered

Chosen Option : --

**Q.12** A and B can do a piece of work in 10 days. B and C can do the same work in 15 days. If A is twice as good a workman as C, find in what time B alone can do the work (in days).

- Ans
- 1. 10
  - 2. 25
  - 3. 20
  - 4. 30

Question ID : 264330156011

Option 1 ID : 264330611443

Option 2 ID : 264330611444

Option 3 ID : 264330611446

Option 4 ID : 264330611445

Status : Answered

Chosen Option : 4

**Q.13** Study the given table and answer the question that follows.  
The tables shows the number of pages printed by four printers in three days.

Days	Printers			
	M	N	O	P
Friday	880	885	877	898
Saturday	972	989	990	786
Sunday	980	790	782	690

If the total number of pages printed by all the given printers together on Monday was 15% more than the total number of pages printed by all the given printers together on Friday, then what was the total number of pages printed by all the given printers together on Monday?

- Ans
- 1. 4071
  - 2. 4026
  - 3. 4580
  - 4. 4128

Question ID : 264330157908

Option 1 ID : 264330618992

Option 2 ID : 264330618994

Option 3 ID : 264330618991

Option 4 ID : 264330618993

Status : Not Answered

Chosen Option : --

**Q.14** A sum of ₹15,000 was lent for 3 years at the rate of 4%, 5%, 6% per annum, respectively, at compound interest for the first year, second year and third year compounded annually. Find the compound interest for 3 years.

- Ans
- 1. ₹2,380.60
  - 2. ₹2,382.60
  - 3. ₹2,362.80
  - 4. ₹2,380.80

Question ID : 264330153850

Option 1 ID : 264330602865

Option 2 ID : 264330602863

Option 3 ID : 264330602864

Option 4 ID : 264330602866

Status : Not Answered

Chosen Option : --

**Q.15** In a class of 50 students, there are 30 girls who scored an average of 88 marks. If the class average is 78, what are the average marks of boys?

- Ans**
- 1. 72
  - 2. 63
  - 3. 80
  - 4. 83

Question ID : 264330156468

Option 1 ID : 264330613261

Option 2 ID : 264330613262

Option 3 ID : 264330613260

Option 4 ID : 264330613259

Status : Answered

Chosen Option : 2

**Q.16** The mean proportion between 17 and some unknown number is 51. What is the unknown number?

- Ans**
- 1. 17
  - 2. 153
  - 3. 51
  - 4. 151

Question ID : 264330154127

Option 1 ID : 264330603973

Option 2 ID : 264330603972

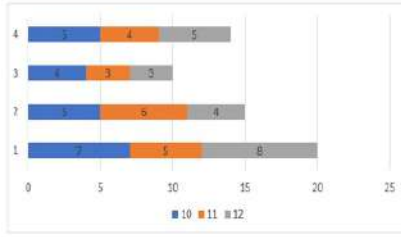
Option 3 ID : 264330603971

Option 4 ID : 264330603974

Status : Not Answered

Chosen Option : --

- Q.17** Consider the percentage of failed students in class 10, class 11 and class 12 in four different schools: 1, 2, 3 and 4 given in the bar graph.



The difference in the average percentage of failed students per class in school 1 and school 3 is \_\_\_\_\_.

Ans

1.  $\frac{11}{3}$   
 2.  $\frac{8}{3}$   
 3.  $\frac{13}{3}$   
 4.  $\frac{10}{3}$

Question ID : 264330153820

Option 1 ID : 264330602744

Option 2 ID : 264330602745

Option 3 ID : 264330602746

Option 4 ID : 264330602743

Status : Not Attempted and Marked For Review

Chosen Option : --

- Q.18** The weight of a circular disc varies directly as the product of the square of the radius and its thickness. Two identical/similar discs have their thickness in the ratio of 16 : 9. What is the ratio of their radii if the weight of the first is four times that of the second?

Ans

1. 3 : 2  
 2. 2 : 3  
 3. 1 : 2  
 4. 2 : 1

Question ID : 264330153771

Option 1 ID : 264330602549

Option 2 ID : 264330602547

Option 3 ID : 264330602548

Option 4 ID : 264330602550

Status : Answered

Chosen Option : 1

Q.19 Simplify the following expression.

$$12 \times 6 \div [\{18 \div (6 - 3)\} - 3] + 6$$

Ans  1. 96

2. 84

3. 20

4. 30

Question ID : 264330155945

Option 1 ID : 264330611182

Option 2 ID : 264330611179

Option 3 ID : 264330611180

Option 4 ID : 264330611181

Status : Answered

Chosen Option : 4

Q.20 A certain number of men complete a piece of work in 60 days. If there were 8 more men called, then the work can be finished in 10 days less than usual. The number of men originally was:

Ans  1. 40

2. 30

3. 60

4. 50

Question ID : 264330156534

Option 1 ID : 264330613524

Option 2 ID : 264330613523

Option 3 ID : 264330613526

Option 4 ID : 264330613525

Status : Answered

Chosen Option : 1

Q.1 Which figure should replace the question mark (?) if the following figure series were to be continued?

N O S E	O N E S	V E X O	E V O X	?
△	X	N	△	
X	V V	△△	S S	N

Ans

✗ 1.

X	△	V	N
	O		
E			S

✗ 2.

X	O	△	N
	V		
E			S

✗ 3.

X	S	V	△
	E		
N			O

✓ 4.

S	O	△	E
	V		
N			X

Question ID : 264330154739

Option 1 ID : 264330606421

Option 2 ID : 264330606422

Option 3 ID : 264330606420

Option 4 ID : 264330606419

Status : Answered

Chosen Option : 4

Q.2 What should come in place of ? in the given series?

92 91 87 78 62 ?

Ans ✓ 1. 37

✗ 2. 38

✗ 3. 35

✗ 4. 36

Question ID : 264330151558

Option 1 ID : 264330593861

Option 2 ID : 264330593862

Option 3 ID : 264330593859

Option 4 ID : 264330593860

Status : Answered

Chosen Option : 1



**Q.3** Read the given statements and conclusions carefully. You have to take the given statements to be true even if they seem to be at variance from commonly known facts. You have to decide which conclusion/s logically follow/s from the given statements.

Statements: All clay is metal. Some metal are bricks. All bricks are tablets.

Conclusion I: Some clay are bricks.

Conclusion II: All metal are tablets.

- Ans**
- 1. Both conclusions (I) and (II) are follow.
  - 2. Only conclusion (II) is follow.
  - 3. Neither conclusion (I) nor (II) is follow.
  - 4. Only conclusion (I) is follow.

Question ID : 264330155934

Option 1 ID : 264330611142

Option 2 ID : 264330611140

Option 3 ID : 264330611141

Option 4 ID : 264330611139

Status : Answered

Chosen Option : 4

**Q.4** In a certain code language, 'just do it' is coded as 'ct ns kw' and 'do your best' is coded as 'mb kw du'. How is 'do' coded in the given language?

- Ans**
- 1. ns
  - 2. ct
  - 3. kw
  - 4. mb

Question ID : 264330151698

Option 1 ID : 264330594421

Option 2 ID : 264330594422

Option 3 ID : 264330594419

Option 4 ID : 264330594420

Status : Answered

Chosen Option : 3

**Q.5** 78 is related to 69 following a certain logic. Following the same logic, 57 is related to 48. To which of the following is 94 related to, following the same logic?

- Ans**
- 1. 83
  - 2. 85
  - 3. 82
  - 4. 84

Question ID : 264330151603

Option 1 ID : 264330594040

Option 2 ID : 264330594042

Option 3 ID : 264330594039

Option 4 ID : 264330594041

Status : Answered

Chosen Option : 2

Q.6 What should come in place of ? in the given series?

124 114 104 94 84 ?

- Ans
- 1. 72
  - 2. 73
  - 3. 71
  - 4. 74

Question ID : 264330151551  
 Option 1 ID : 264330593832  
 Option 2 ID : 264330593833  
 Option 3 ID : 264330593831  
 Option 4 ID : 264330593834  
 Status : Answered  
 Chosen Option : 4

Q.7 What will come in the place of '?' in the following equation, if '+' and '-' are interchanged and '×' and '÷' are interchanged?

$$105 \times 7 + 43 - 37 \div 3 = ?$$

- Ans
- 1. 53
  - 2. 83
  - 3. 73
  - 4. 63

Question ID : 264330155666  
 Option 1 ID : 264330610070  
 Option 2 ID : 264330610069  
 Option 3 ID : 264330610068  
 Option 4 ID : 264330610067  
 Status : Answered  
 Chosen Option : 3

Q.8 Read the given statement(s) and conclusions carefully. Assuming that the information given in the statements is true, even if it appears to be at variance with commonly known facts, decide which of the given conclusions logically follow(s) from the statement(s).

Statements: All cars are cats. All fans are cats.

Conclusions:

- (I) All cars are fans.
- (II) Some fans are cars.

- Ans
- 1. Only conclusion (I) is follows.
  - 2. Only conclusion (II) is follows.
  - 3. Neither conclusion (I) nor (II) is follows.
  - 4. Both conclusions (I) and (II) are follows.

Question ID : 264330154430  
 Option 1 ID : 264330605183  
 Option 2 ID : 264330605184  
 Option 3 ID : 264330605185  
 Option 4 ID : 264330605186  
 Status : Answered  
 Chosen Option : 3

**Q.9** In the following number-pairs, the second number is obtained by applying certain mathematical operations to the first number. Select the set in which the numbers are related in the same way as are the numbers of the following sets.  
(NOTE: Operations should be performed on the whole numbers, without breaking down the numbers into its constituent digits. E.g. 13 – Operations on 13 such as adding /deleting /multiplying etc. to 13 can be performed. Breaking down 13 into 1 and 3 and then performing mathematical operations on 1 and 3 is not allowed)  
12 : 44  
8 : 28

- Ans**
- 1. 9 : 32
  - 2. 7 : 28
  - 3. 15 : 35
  - 4. 10 : 38

Question ID : 264330154645

Option 1 ID : 264330606046

Option 2 ID : 264330606043

Option 3 ID : 264330606045

Option 4 ID : 264330606044

Status : Answered

Chosen Option : 4

**Q.10** What should come in place of ? in the given series based on the English alphabetical order?

EVO, HSR, KPU, NMX, ?

- Ans**
- 1. RIC
  - 2. PHB
  - 3. QJA
  - 4. PIB

Question ID : 264330155797

Option 1 ID : 264330610591

Option 2 ID : 264330610593

Option 3 ID : 264330610594

Option 4 ID : 264330610592

Status : Answered

Chosen Option : 3

**Q.11** What should come in place of ? in the given series based on the English alphabetical order?

MCT, JEU, GGV, DIW, ?

- Ans**
- 1. CJY
  - 2. BKZ
  - 3. BIY
  - 4. AKX

Question ID : 264330155804

Option 1 ID : 264330610619

Option 2 ID : 264330610622

Option 3 ID : 264330610620

Option 4 ID : 264330610621

Status : Answered

Chosen Option : 4

**Q.12** DTGB is related to FVID in a certain way based on the English alphabetical order. In the same way, VRCK is related to XTEM. To which of the following is JAHM related to, following the same logic?

- Ans**
- 1. KBJP
  - 2. LDKO
  - 3. MCKP
  - 4. LCJO

Question ID : 264330151661  
 Option 1 ID : 264330594273  
 Option 2 ID : 264330594274  
 Option 3 ID : 264330594271  
 Option 4 ID : 264330594272  
 Status : Answered  
 Chosen Option : 4

**Q.13** What will come in the place of the question mark (?) in the following equation, if '+' and '-' are interchanged and 'x' and '+' are interchanged?  
 $29 + 6 + 5 - 98 \times 2 = ?$

- Ans**
- 1. 217
  - 2. 219
  - 3. 218
  - 4. 220

Question ID : 264330154617  
 Option 1 ID : 264330605931  
 Option 2 ID : 264330605933  
 Option 3 ID : 264330605932  
 Option 4 ID : 264330605934  
 Status : Answered  
 Chosen Option : 3

**Q.14** A, B, C, D, E, F, G and H are sitting around a square table facing the center of the table. Some of them are sitting at the corners while some are sitting at the exact center of the sides. H sits third to the left of B. H does not sit in any of the corners. C sits third to the right of F. C sits in one of the corners. H is the immediate neighbour of D and E. A is not the neighbour of B. E sits immediate next to A.

How many people sit between A and H, when counted from the left of A?

- Ans**
- 1. Three
  - 2. Six
  - 3. Four
  - 4. Five

Question ID : 264330155538  
 Option 1 ID : 264330609555  
 Option 2 ID : 264330609558  
 Option 3 ID : 264330609556  
 Option 4 ID : 264330609557  
 Status : Answered  
 Chosen Option : 4

**Q.15** In a certain code language, 'TOP' is coded as '22-17-18' and 'BIZ' is coded as '4-11-28'. What is the code for 'MAR' in the given code language?

- Ans**
- ✗ 1. 15-5-21
  - ✗ 2. 16-5-20
  - ✗ 3. 14-4-21
  - ✓ 4. 15-3-20

Question ID : **264330155824**  
 Option 1 ID : **264330610701**  
 Option 2 ID : **264330610702**  
 Option 3 ID : **264330610700**  
 Option 4 ID : **264330610699**  
 Status : **Answered**  
 Chosen Option : **4**

**Q.16** Select the option figure in which the given figure (X) is embedded as its part (rotation is NOT allowed).



**Ans**

- ✗ 1.
- ✗ 2.
- ✗ 3.
- ✓ 4.

Question ID : **264330151727**  
 Option 1 ID : **264330594535**  
 Option 2 ID : **264330594538**  
 Option 3 ID : **264330594536**  
 Option 4 ID : **264330594537**  
 Status : **Answered**  
 Chosen Option : **4**

Q.17 What should come in place of ? in the given series?

15 26 48 81 125 ?

- Ans
- 1. 155
  - 2. 180
  - 3. 169
  - 4. 194

Question ID : 264330151716  
Option 1 ID : 264330594493  
Option 2 ID : 264330594492  
Option 3 ID : 264330594491  
Option 4 ID : 264330594494  
Status : Answered  
Chosen Option : 2

Q.18 The position of how many letters will remain unchanged if each of the letters in the word COMPUTER is arranged in alphabetical order?

- Ans
- 1. two
  - 2. none
  - 3. one
  - 4. three

Question ID : 264330156444  
Option 1 ID : 264330613169  
Option 2 ID : 264330613167  
Option 3 ID : 264330613168  
Option 4 ID : 264330613170  
Status : Answered  
Chosen Option : 1

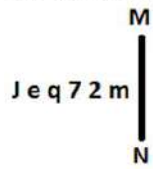
Q.19 Select the combination of letters that when sequentially placed in the blanks of the given series, will complete the series.

BA \_ B \_ B \_ \_ BB \_ B

- Ans
- 1. ABABB
  - 2. AABAB
  - 3. BABAA
  - 4. BAABB

Question ID : 264330151637  
Option 1 ID : 264330594177  
Option 2 ID : 264330594176  
Option 3 ID : 264330594178  
Option 4 ID : 264330594175  
Status : Answered  
Chosen Option : 3

Q.20 Select the correct mirror image of the given figure when the mirror is placed at MN as shown below.



- Ans
- 1.  $\omega \Sigma \Upsilon b \theta l$
  - 2.  $m \Sigma \Upsilon p \theta l$
  - 3.  $m \Sigma 7 p \theta J$
  - 4.  $m 7 2 p e l$

Question ID : 264330151511

Option 1 ID : 264330593673

Option 2 ID : 264330593671

Option 3 ID : 264330593672

Option 4 ID : 264330593674

Status : Answered

Chosen Option : 2

Section : General Awareness

Q.1 Instituted in 1984, the National-level Lata Mangeshkar Award is given to promote excellence in the area of light music annually by the \_\_\_\_\_ government's culture department.

- Ans
- 1. Madhya Pradesh
  - 2. Rajasthan
  - 3. Karnataka
  - 4. Goa

Question ID : 264330155468

Option 1 ID : 264330609277

Option 2 ID : 264330609278

Option 3 ID : 264330609275

Option 4 ID : 264330609276

Status : Answered

Chosen Option : 2

Q.2 The Sakraat festival is celebrated with the 'Budigali' or 'Kalasi' dance in \_\_\_\_\_, where women take part in this dance, carrying decorative pots on their heads.

- Ans
- 1. Odisha
  - 2. Nagaland
  - 3. Madhya Pradesh
  - 4. Manipur

Question ID : 264330160801

Option 1 ID : 264330630536

Option 2 ID : 264330630538

Option 3 ID : 264330630537

Option 4 ID : 264330630535

Status : Answered

Chosen Option : 1

**Q.3** The National Social Assistance Programme (NSAP) is a welfare programme being administered by which Ministry of Government of India?

- Ans**
- 1. Ministry of Tribal Affairs
  - 2. Ministry of Home Affairs
  - 3. Ministry of Agriculture and Farmers Welfare
  - 4. Ministry of Rural Development

Question ID : 264330161570  
Option 1 ID : 264330633610  
Option 2 ID : 264330633608  
Option 3 ID : 264330633607  
Option 4 ID : 264330633609  
Status : Answered  
Chosen Option : 4

**Q.4** What is the main source of income for commercial banks?

- Ans**
- 1. Donations from customers
  - 2. Profits from stock market investments
  - 3. Government grants
  - 4. Interest earned on loans and advances

Question ID : 264330157308  
Option 1 ID : 264330616596  
Option 2 ID : 264330616598  
Option 3 ID : 264330616595  
Option 4 ID : 264330616597  
Status : Answered  
Chosen Option : 4

**Q.5** The Taj Mahal was built by:

- Ans**
- 1. Humayun
  - 2. Jahangir
  - 3. Akbar
  - 4. Shah Jahan

Question ID : 264330160768  
Option 1 ID : 264330630403  
Option 2 ID : 264330630404  
Option 3 ID : 264330630405  
Option 4 ID : 264330630406  
Status : Answered  
Chosen Option : 4

**Q.6** Who among the following made Ganesh Chaturthi popular as a public celebration in Maharashtra?

- Ans**
- 1. Lokmanya Bal Gangadhar Tilak
  - 2. Khudiram Bose
  - 3. Vinayak Damodar Savarkar
  - 4. Lala Lajpat Rai

Question ID : 264330160828  
Option 1 ID : 264330630644  
Option 2 ID : 264330630643  
Option 3 ID : 264330630646  
Option 4 ID : 264330630645  
Status : Answered  
Chosen Option : 3



**Q.7 Which country's Constitution was the inspiration behind the Directive Principles of the Indian Constitution?**

- Ans
- 1. The Constitution of Australia
  - 2. The Constitution of the United States
  - 3. The Constitution of the United Kingdom
  - 4. The Constitution of Ireland

Question ID : 264330162252  
Option 1 ID : 264330636338  
Option 2 ID : 264330636335  
Option 3 ID : 264330636336  
Option 4 ID : 264330636337  
Status : Answered  
Chosen Option : 4

**Q.8 When one stone is thrown upwards, what type of energy conversion would occur?**

- Ans
- 1. Kinetic energy would change to mechanical energy
  - 2. Potential energy would change to gravitational energy
  - 3. Mechanical energy would change to kinetic energy
  - 4. Kinetic energy would change to gravitational potential energy

Question ID : 264330156581  
Option 1 ID : 264330613711  
Option 2 ID : 264330613713  
Option 3 ID : 264330613712  
Option 4 ID : 264330613714  
Status : Answered  
Chosen Option : 4

**Q.9 Lack of functional small intestine can cause a malabsorption disorder leading to diarrhoea, malnutrition, weight loss etc. This particular condition is known as:**

- Ans
- 1. Down syndrome
  - 2. short bowel syndrome
  - 3. hypoglycaemia
  - 4. hyperglycaemia

Question ID : 264330156613  
Option 1 ID : 264330613840  
Option 2 ID : 264330613839  
Option 3 ID : 264330613842  
Option 4 ID : 264330613841  
Status : Not Answered  
Chosen Option : --

**Q.10 In December 2022, Government of India launched Grih Pravesh scheme. This scheme aims to provide benefits to the residents of \_\_\_\_ areas.**

- Ans
- 1. only urban
  - 2. only rural
  - 3. only tribal
  - 4. both rural and urban

Question ID : 264330158324  
Option 1 ID : 264330620656  
Option 2 ID : 264330620655  
Option 3 ID : 264330620657  
Option 4 ID : 264330620658  
Status : Answered  
Chosen Option : 4

**Q.11 Indian Industrialists reacted against colonial policies that restricted business activities and formed an organisation in 1927. What was it called?**

- Ans
- 1. Indian Industrial and Commercial Congress(IICC)
  - 2. Organization of Industries of India (OII)
  - 3. Federation of the Indian Chamber of Commerce and Industries (FICCI)
  - 4. Confederation of Indian Industries (CII)

Question ID : 264330161742  
Option 1 ID : 264330634295  
Option 2 ID : 264330634296  
Option 3 ID : 264330634298  
Option 4 ID : 264330634297  
Status : Not Answered  
Chosen Option : --

**Q.12 Who founded the All-India Forward Bloc Party?**

- Ans
- 1. Chandra Shekar Azad
  - 2. Bhagat Singh
  - 3. Rasbehari Bose
  - 4. Subhas Chandra Bose

Question ID : 264330162330  
Option 1 ID : 264330636648  
Option 2 ID : 264330636647  
Option 3 ID : 264330636650  
Option 4 ID : 264330636649  
Status : Answered  
Chosen Option : 4

**Q.13 The Constitution allows \_\_\_\_\_ maximum members in Lok Sabha as of June 2023.**

- Ans
- 1. 546
  - 2. 550
  - 3. 545
  - 4. 543

Question ID : 264330160864  
Option 1 ID : 264330630789  
Option 2 ID : 264330630790  
Option 3 ID : 264330630788  
Option 4 ID : 264330630787  
Status : Answered  
Chosen Option : 2

**Q.14 Which of the following novels is based on the partition of India and was written by Khushwant Singh?**

- Ans
- 1. The Great Indian Novel
  - 2. Untouchables
  - 3. Narcopolis
  - 4. Train to Pakistan

Question ID : 264330161760  
Option 1 ID : 264330634369  
Option 2 ID : 264330634368  
Option 3 ID : 264330634370  
Option 4 ID : 264330634367  
Status : Answered  
Chosen Option : 4

**Q.15** Which institution mainly provides financial assistance and support to microfinance institutions in India?

- Ans**
- 1. Department of Economic Affairs (DEA)
  - 2. Ministry of Corporate Affairs
  - 3. Indian Banks' Association (IBA)
  - 4. Small Industries Development Bank of India (SIDBI)

Question ID : 264330157295  
Option 1 ID : 264330616546  
Option 2 ID : 264330616545  
Option 3 ID : 264330616544  
Option 4 ID : 264330616543  
Status : Answered  
Chosen Option : 4

**Q.16** Mango showers are associated with which two states?

- Ans**
- 1. Kerala and Karnataka
  - 2. Uttar Pradesh and Bihar
  - 3. Kerala and Andhra Pradesh
  - 4. Andhra Pradesh and Karnataka

Question ID : 264330160146  
Option 1 ID : 264330627926  
Option 2 ID : 264330627925  
Option 3 ID : 264330627923  
Option 4 ID : 264330627924  
Status : Not Answered  
Chosen Option : --

**Q.17** The Padma Shri awardee (2016) Gulabo Sapera is known as the Queen of \_\_\_\_\_ dance.

- Ans**
- 1. Chari
  - 2. Bhavai
  - 3. Kalbeliya
  - 4. Kacchi Ghodi

Question ID : 264330155524  
Option 1 ID : 264330609501  
Option 2 ID : 264330609500  
Option 3 ID : 264330609499  
Option 4 ID : 264330609502  
Status : Answered  
Chosen Option : 3

Q.18 Who among the following is the author of the novel 'Untouchable'?

- Ans
- 1. Mulk Raj Anand
  - 2. Salman Rushdie
  - 3. Vikram Seth
  - 4. Amitav Ghosh

Question ID : 264330155453  
Option 1 ID : 264330609217  
Option 2 ID : 264330609218  
Option 3 ID : 264330609215  
Option 4 ID : 264330609216  
Status : Answered  
Chosen Option : 2

Q.19 Lachhu Maharaj is a celebrated \_\_\_\_\_ dancer.

- Ans
- 1. Kuchipudi
  - 2. Bharatnatyam
  - 3. Odissi
  - 4. Kathak

Question ID : 264330159067  
Option 1 ID : 264330623628  
Option 2 ID : 264330623627  
Option 3 ID : 264330623630  
Option 4 ID : 264330623629  
Status : Answered  
Chosen Option : 4

Q.20 What is the name of the mascot for the 37<sup>th</sup> National Games?

- Ans
- 1. Jelly
  - 2. Pandi
  - 3. Olly
  - 4. Moga

Question ID : 264330161138  
Option 1 ID : 264330631884  
Option 2 ID : 264330631886  
Option 3 ID : 264330631885  
Option 4 ID : 264330631883  
Status : Not Answered  
Chosen Option : --

Q.21 Ustad Allah Rakha and Ustad Zakir Hussain are both famous \_\_\_\_\_ players of India.

- Ans
- 1. veena
  - 2. bansuri
  - 3. tabla
  - 4. sarangi

Question ID : 264330155505  
Option 1 ID : 264330609424  
Option 2 ID : 264330609425  
Option 3 ID : 264330609423  
Option 4 ID : 264330609426  
Status : Answered  
Chosen Option : 3

**Q.22** Manika Batra won bronze medal in Asian Cup tournament. She is related to which sport?

- Ans
- 1. Judo
  - 2. Chess
  - 3. Table Tennis
  - 4. Gymnastic

Question ID : 264330158371  
Option 1 ID : 264330620846  
Option 2 ID : 264330620845  
Option 3 ID : 264330620843  
Option 4 ID : 264330620844  
Status : Answered  
Chosen Option : 3

**Q.23** What is the name of the geographic feature that serves as a boundary between India and Sri Lanka?

- Ans
- 1. Strait of Gibraltar
  - 2. Dardanelles Strait
  - 3. Bosporus Strait
  - 4. Palk Strait

Question ID : 264330161328  
Option 1 ID : 264330632641  
Option 2 ID : 264330632642  
Option 3 ID : 264330632639  
Option 4 ID : 264330632640  
Status : Answered  
Chosen Option : 4

**Q.24** FIFA U-17 Women's World Cup 2022 final was held in which city?

- Ans
- 1. Margo
  - 2. Navi Mumbai
  - 3. Bhubaneswar
  - 4. Ahmedabad

Question ID : 264330158224  
Option 1 ID : 264330620257  
Option 2 ID : 264330620255  
Option 3 ID : 264330620256  
Option 4 ID : 264330620258  
Status : Answered  
Chosen Option : 4

Q.25 The Tata Iron and Steel Company Limited (TISCO) was started in the year \_\_\_\_\_ at Sakchi in Jharkhand state.

- Ans  1. 1989  
 2. 1907  
 3. 1951  
 4. 1975

Question ID : 264330161514  
Option 1 ID : 264330633385  
Option 2 ID : 264330633383  
Option 3 ID : 264330633384  
Option 4 ID : 264330633386  
Status : Answered  
Chosen Option : 2

Section : English Language and Comprehension

Q.1 The following sentence has been split into four segments. Identify the segment that contains a grammatical error.  
By the time I turn thirty / I would had visited every / continent in the world and have gained / a wealth of knowledge and experience.

- Ans  1. By the time I turn thirty  
 2. a wealth of knowledge and experience  
 3. I would had visited every  
 4. continent in the world and have gained

Question ID : 264330144177  
Option 1 ID : 264330564971  
Option 2 ID : 264330564974  
Option 3 ID : 264330564972  
Option 4 ID : 264330564973  
Status : Answered  
Chosen Option : 1

Q.2 The following sentence has been divided into four parts. Identify the part that contains an error.  
(A) It is a / (B) state of chaos / (C) since the / (D) chairman resigned.

- Ans  1. D  
 2. A  
 3. B  
 4. C

Question ID : 264330152624  
Option 1 ID : 264330598099  
Option 2 ID : 264330598102  
Option 3 ID : 264330598101  
Option 4 ID : 264330598100  
Status : Answered  
Chosen Option : 2

**Q.3** Select the most appropriate meaning of the given idiom.

The apple of one's eye

- Ans  1. Very cheerful  
 2. Very dear  
 3. Very nice  
 4. Very pleasing

Question ID : 264330155393  
Option 1 ID : 264330608985  
Option 2 ID : 264330608983  
Option 3 ID : 264330608984  
Option 4 ID : 264330608986  
Status : Answered  
Chosen Option : 2

**Q.4** Select the most appropriate ANTONYM of the given word.

Harmony

- Ans  1. Adaptability  
 2. Clarity  
 3. Unity  
 4. Conflict

Question ID : 264330152743  
Option 1 ID : 264330598571  
Option 2 ID : 264330598574  
Option 3 ID : 264330598572  
Option 4 ID : 264330598573  
Status : Answered  
Chosen Option : 4

**Q.5** Select the most appropriate option that can substitute the underlined segment in the given sentence.

Pandemics have often been caused by a disease that spreads by physical touch or contact.

- Ans  1. are contagious  
 2. are vigorous  
 3. are robust  
 4. are fastidious

Question ID : 264330153386  
Option 1 ID : 264330601089  
Option 2 ID : 264330601090  
Option 3 ID : 264330601088  
Option 4 ID : 264330601087  
Status : Answered  
Chosen Option : 1

**Q.6** Select the most appropriate meaning of the underlined idiom in the given sentence.  
The two neighbours will probably stop fighting when pigs fly.

- Ans
- 1. When their families meet
  - 2. When there is magic
  - 3. Something that is impossible
  - 4. When it rains

Question ID : 264330161581  
Option 1 ID : 264330633654  
Option 2 ID : 264330633651  
Option 3 ID : 264330633653  
Option 4 ID : 264330633652  
Status : Answered  
Chosen Option : 2

**Q.7** Select the most appropriate option to fill in the blank.

Her dedication to her work was \_\_\_\_\_ what anyone had expected.

- Ans
- 1. over
  - 2. beyond
  - 3. beside
  - 4. through

Question ID : 264330151862  
Option 1 ID : 264330595069  
Option 2 ID : 264330595070  
Option 3 ID : 264330595068  
Option 4 ID : 264330595067  
Status : Answered  
Chosen Option : 2

**Q.8** There is a spelling error in the given sentence. Select the option that contains the INCORRECTLY spelt word.

He was in despare because of the expiry of his licence.

- Ans
- 1. expiry
  - 2. because
  - 3. licence
  - 4. despare

Question ID : 264330152838  
Option 1 ID : 264330598945  
Option 2 ID : 264330598944  
Option 3 ID : 264330598946  
Option 4 ID : 264330598943  
Status : Answered  
Chosen Option : 4



**Q.9** Select the most appropriate ANTONYM of the given word.  
**Demolish**

- Ans**  1. Invite  
 2. Criticise  
 3. Construct  
 4. Appreciate

Question ID : 264330152742  
Option 1 ID : 264330598568  
Option 2 ID : 264330598569  
Option 3 ID : 264330598567  
Option 4 ID : 264330598570  
Status : Answered  
Chosen Option : 3

**Q.10** Parts of the following sentence have been given as options. Select the option that contains an error.  
**Tushar is junior than all his colleagues.**

- Ans**  1. junior than all  
 2. is  
 3. Tushar  
 4. his colleagues

Question ID : 264330152800  
Option 1 ID : 264330598793  
Option 2 ID : 264330598792  
Option 3 ID : 264330598791  
Option 4 ID : 264330598794  
Status : Answered  
Chosen Option : 1

**Q.11** Select the most appropriate synonym of the given word.  
**Enchanted**

- Ans**  1. Disgusted  
 2. Cursed  
 3. Appealing  
 4. Repelling

Question ID : 264330152594  
Option 1 ID : 264330597979  
Option 2 ID : 264330597980  
Option 3 ID : 264330597981  
Option 4 ID : 264330597982  
Status : Answered  
Chosen Option : 3

**Q.12** Select the most appropriate meaning of the given idiom.  
**By the skin of your teeth**

- Ans**  1. By a very narrow margin  
 2. To be less affected by criticisms and rebuffs  
 3. Very protective  
 4. Saved by others

Question ID : 264330155284  
Option 1 ID : 264330608582  
Option 2 ID : 264330608579  
Option 3 ID : 264330608581  
Option 4 ID : 264330608580  
Status : Answered  
Chosen Option : 3

**Q.13** The following sentence has been divided into four parts. Identify the part that contains an error.  
**(A) One of / (B) my brothers write / (C) novels for / (D) leisure.**

- Ans**  1. D  
 2. A  
 3. B  
 4. C

Question ID : 264330152617  
Option 1 ID : 264330598073  
Option 2 ID : 264330598071  
Option 3 ID : 264330598074  
Option 4 ID : 264330598072  
Status : Answered  
Chosen Option : 3

**Q.14** The following sentence has been split into four segments. Identify the segment that contains a grammatical error.

**Henry is known / as an excellent writer / and good communicator / in English.**

- Ans**  1. as an excellent writer  
 2. in English  
 3. Henry is known  
 4. and good communicator

Question ID : 264330155413  
Option 1 ID : 264330609060  
Option 2 ID : 264330609062  
Option 3 ID : 264330609059  
Option 4 ID : 264330609061  
Status : Answered  
Chosen Option : 2

**Q.15** Select the option that can be used as a one-word substitute for the given group of words.

The arrangement of events or dates in the order of their occurrence

- Ans  1. Chronology  
 2. Theology  
 3. Entomology  
 4. Psychology

Question ID : 264330152773  
Option 1 ID : 264330598685  
Option 2 ID : 264330598684  
Option 3 ID : 264330598686  
Option 4 ID : 264330598683  
Status : Answered  
Chosen Option : 1

**Q.16** Choose the most appropriate meaning of the underlined idiom in the given sentence.

As soon as Rohan learned that he had topped the examination, he was on cloud nine.

- Ans  1. Very tense  
 2. Very sad  
 3. Very happy  
 4. Very confused

Question ID : 264330153324  
Option 1 ID : 264330600852  
Option 2 ID : 264330600853  
Option 3 ID : 264330600851  
Option 4 ID : 264330600854  
Status : Answered  
Chosen Option : 3

**Q.17** Select the most appropriate option that can substitute the underlined segment in the following sentence.

His research on the migratory patterns of the birds is run-of-the-mill.

- Ans  1. absurd  
 2. one in a million  
 3. trash  
 4. average

Question ID : 264330152634  
Option 1 ID : 264330598142  
Option 2 ID : 264330598140  
Option 3 ID : 264330598141  
Option 4 ID : 264330598139  
Status : Answered  
Chosen Option : 3

**Q.18** Select the option that rectifies the spelling of the underlined word in the given sentence.

The politician guaranted that he would create jobs if elected.

- Ans
- 1. gurranted
  - 2. gauaranteed
  - 3. guarranteed
  - 4. guaranteed

Question ID : 264330153227  
Option 1 ID : 264330600468  
Option 2 ID : 264330600470  
Option 3 ID : 264330600469  
Option 4 ID : 264330600467  
Status : Answered  
Chosen Option : 1

**Q.19** Select the most appropriate option to fill in the blank.  
The old man distributed his property \_\_\_\_\_ his ten grandchildren equally.

- Ans
- 1. within
  - 2. among
  - 3. towards
  - 4. between

Question ID : 264330152731  
Option 1 ID : 264330598525  
Option 2 ID : 264330598524  
Option 3 ID : 264330598526  
Option 4 ID : 264330598523  
Status : Answered  
Chosen Option : 4

**Q.20** Select the INCORRECTLY spelt word.

- Ans
- 1. Paraphernalia
  - 2. Handkerchiefs
  - 3. Conjuror
  - 4. Indispensible

Question ID : 264330152962  
Option 1 ID : 264330599425  
Option 2 ID : 264330599424  
Option 3 ID : 264330599423  
Option 4 ID : 264330599426  
Status : Answered  
Chosen Option : 1

**Comprehension:**

In the following passage, some words have been deleted. Read the passage carefully and select the most appropriate option to fill in each blank.

Medical hand practices have been an integral part of healthcare for centuries, but with technological advancements, machines are (1)\_\_\_\_\_ taking over. Robotic surgeries, for instance, have become increasingly popular, allowing surgeons to perform complex (2)\_\_\_\_\_ with minimal invasive techniques. Machine learning and artificial intelligence have transformed medical diagnosis by analysing large amounts of patient data and providing highly detailed medical images. However, there are still challenges to overcome in the use of these technologies in healthcare. For example, the cost of purchasing and maintaining medical machines can be high, and there are concerns around the ethical use of AI in medicine. Nonetheless, it is clear that medical hand practices are (3)\_\_\_\_\_ to machines, and these developments have the potential to revolutionise the healthcare industry. Additionally, the use of telemedicine and remote monitoring devices allows patients to receive medical care from the (4)\_\_\_\_\_ of their homes, particularly beneficial for those in rural or remote areas. Furthermore, medical machines provide healthcare professionals with real-time information, (5)\_\_\_\_\_ them to make informed decisions and adjust treatment plans accordingly.

**SubQuestion No : 21**

**Q.21** Select the most appropriate option to fill in blank no. 1.

- Ans  1. sincerely  
 2. partially  
 3. gradually  
 4. deliberately

Question ID : 264330153645

Option 1 ID : 264330602050

Option 2 ID : 264330602047

Option 3 ID : 264330602048

Option 4 ID : 264330602049

Status : Answered

Chosen Option : 3

**Comprehension:**

In the following passage, some words have been deleted. Read the passage carefully and select the most appropriate option to fill in each blank.

Medical hand practices have been an integral part of healthcare for centuries, but with technological advancements, machines are (1)\_\_\_\_\_ taking over. Robotic surgeries, for instance, have become increasingly popular, allowing surgeons to perform complex (2)\_\_\_\_\_ with minimal invasive techniques. Machine learning and artificial intelligence have transformed medical diagnosis by analysing large amounts of patient data and providing highly detailed medical images. However, there are still challenges to overcome in the use of these technologies in healthcare. For example, the cost of purchasing and maintaining medical machines can be high, and there are concerns around the ethical use of AI in medicine. Nonetheless, it is clear that medical hand practices are (3)\_\_\_\_\_ to machines, and these developments have the potential to revolutionise the healthcare industry. Additionally, the use of telemedicine and remote monitoring devices allows patients to receive medical care from the (4)\_\_\_\_\_ of their homes, particularly beneficial for those in rural or remote areas. Furthermore, medical machines provide healthcare professionals with real-time information, (5)\_\_\_\_\_ them to make informed decisions and adjust treatment plans accordingly.

**SubQuestion No : 22**

**Q.22** Select the most appropriate option to fill in blank no. 2.

- Ans  1. therapies  
 2. diagnosis  
 3. analysis  
 4. procedures

Question ID : 264330153646

Option 1 ID : 264330602053

Option 2 ID : 264330602051

Option 3 ID : 264330602052

Option 4 ID : 264330602054

Status : Answered

Chosen Option : 1

**Comprehension:**

In the following passage, some words have been deleted. Read the passage carefully and select the most appropriate option to fill in each blank.

Medical hand practices have been an integral part of healthcare for centuries, but with technological advancements, machines are (1)\_\_\_\_\_ taking over. Robotic surgeries, for instance, have become increasingly popular, allowing surgeons to perform complex (2)\_\_\_\_\_ with minimal invasive techniques. Machine learning and artificial intelligence have transformed medical diagnosis by analysing large amounts of patient data and providing highly detailed medical images. However, there are still challenges to overcome in the use of these technologies in healthcare. For example, the cost of purchasing and maintaining medical machines can be high, and there are concerns around the ethical use of AI in medicine. Nonetheless, it is clear that medical hand practices are (3)\_\_\_\_\_ to machines, and these developments have the potential to revolutionise the healthcare industry. Additionally, the use of telemedicine and remote monitoring devices allows patients to receive medical care from the (4)\_\_\_\_\_ of their homes, particularly beneficial for those in rural or remote areas. Furthermore, medical machines provide healthcare professionals with real-time information, (5)\_\_\_\_\_ them to make informed decisions and adjust treatment plans accordingly.

**SubQuestion No : 23**

**Q.23** Select the most appropriate option to fill in blank no. 3.

- Ans  1. diminishing  
 2. evolving  
 3. depleting  
 4. stagnating

Question ID : **264330153647**

Option 1 ID : **264330602056**

Option 2 ID : **264330602057**

Option 3 ID : **264330602055**

Option 4 ID : **264330602058**

Status : **Not Answered**

Chosen Option : --

**Comprehension:**

In the following passage, some words have been deleted. Read the passage carefully and select the most appropriate option to fill in each blank.

Medical hand practices have been an integral part of healthcare for centuries, but with technological advancements, machines are (1)\_\_\_\_\_ taking over. Robotic surgeries, for instance, have become increasingly popular, allowing surgeons to perform complex (2)\_\_\_\_\_ with minimal invasive techniques. Machine learning and artificial intelligence have transformed medical diagnosis by analysing large amounts of patient data and providing highly detailed medical images. However, there are still challenges to overcome in the use of these technologies in healthcare. For example, the cost of purchasing and maintaining medical machines can be high, and there are concerns around the ethical use of AI in medicine. Nonetheless, it is clear that medical hand practices are (3)\_\_\_\_\_ to machines, and these developments have the potential to revolutionise the healthcare industry. Additionally, the use of telemedicine and remote monitoring devices allows patients to receive medical care from the (4)\_\_\_\_\_ of their homes, particularly beneficial for those in rural or remote areas. Furthermore, medical machines provide healthcare professionals with real-time information, (5)\_\_\_\_\_ them to make informed decisions and adjust treatment plans accordingly.

**SubQuestion No : 24**

**Q.24** Select the most appropriate option to fill in blank no. 4.

- Ans  1. locality  
 2. comfort  
 3. range  
 4. inconvenience

Question ID : **264330153648**

Option 1 ID : **264330602061**

Option 2 ID : **264330602059**

Option 3 ID : **264330602062**

Option 4 ID : **264330602060**

Status : **Answered**

Chosen Option : 1

**Comprehension:**

In the following passage, some words have been deleted. Read the passage carefully and select the most appropriate option to fill in each blank.

Medical hand practices have been an integral part of healthcare for centuries, but with technological advancements, machines are (1)\_\_\_\_\_ taking over. Robotic surgeries, for instance, have become increasingly popular, allowing surgeons to perform complex (2)\_\_\_\_\_ with minimal invasive techniques. Machine learning and artificial intelligence have transformed medical diagnosis by analysing large amounts of patient data and providing highly detailed medical images. However, there are still challenges to overcome in the use of these technologies in healthcare. For example, the cost of purchasing and maintaining medical machines can be high, and there are concerns around the ethical use of AI in medicine. Nonetheless, it is clear that medical hand practices are (3)\_\_\_\_\_ to machines, and these developments have the potential to revolutionise the healthcare industry. Additionally, the use of telemedicine and remote monitoring devices allows patients to receive medical care from the (4)\_\_\_\_\_ of their homes, particularly beneficial for those in rural or remote areas. Furthermore, medical machines provide healthcare professionals with real-time information, (5)\_\_\_\_\_ them to make informed decisions and adjust treatment plans accordingly.

**SubQuestion No : 25**

**Q.25** Select the most appropriate option to fill in blank no. 5.

- Ans
- 1. reimagining
  - 2. adapting
  - 3. neglecting
  - 4. enabling

Question ID : **264330153649**

Option 1 ID : **264330602064**

Option 2 ID : **264330602063**

Option 3 ID : **264330602065**

Option 4 ID : **264330602066**

Status : **Answered**

Chosen Option : **4**