

SSC MTS 2023 Tier 1 Sept 13 Shift 1 Question Paper with Answers

Roll Number	
Candidate Name	
Exam Date	13/09/2023
Exam Time	9:00 AM - 11:00 AM
Subject	MTS Non Tech Havaldar CBIC and CBN Examination 2023

Section : Numerical and Mathematical Ability

Q.1 By selling a calculator for ₹1,080, there is a loss of 10%, if the article is sold for ₹1,350, the net result in the transaction is:

- Ans
- 1. $12\frac{1}{2}\%$ loss
 - 2. 12% gain
 - 3. $12\frac{1}{2}\%$ gain
 - 4. 12% loss

Question ID : 264330159027

Option 1 ID : 264330623468

Option 2 ID : 264330623469

Option 3 ID : 264330623467

Option 4 ID : 264330623470

Status : Answered

Chosen Option : 3

Q.2 If the $\frac{5}{6}$ of a number is 10 less than the number itself, then $\frac{7}{5}$ of the number is _____.

- Ans
- 1. 72
 - 2. 96
 - 3. 60
 - 4. 84

Question ID : 264330153806

Option 1 ID : 264330602687

Option 2 ID : 264330602690

Option 3 ID : 264330602688

Option 4 ID : 264330602689

Status : Answered

Chosen Option : 4

Q.3 A boat travels upstream from B to A and downstream from A to B in 3 hours. If the speed of the boat in still water is 9 km/h and the speed of the current is 3.5 km/h, the distance between A and B is: (correct up to two decimal places)

- Ans**
- 1. 14.46 km
 - 2. 13.46 km
 - 3. 12.46 km
 - 4. 11.46 km

Question ID : 264330156348
Option 1 ID : 264330612794
Option 2 ID : 264330612792
Option 3 ID : 264330612791
Option 4 ID : 264330612793
Status : Marked For Review
Chosen Option : 4

Q.4 Two trains are travelling in the same direction on parallel tracks. Train A is travelling at 30 km/h and Train B is travelling at 60 km/h. If Train A is 400 m long and it takes Train B two minutes to pass Train A, what is the length of Train B?

- Ans**
- 1. 700 m
 - 2. 500 m
 - 3. 400 m
 - 4. 600 m

Question ID : 264330156275
Option 1 ID : 264330612502
Option 2 ID : 264330612500
Option 3 ID : 264330612499
Option 4 ID : 264330612501
Status : Answered
Chosen Option : 1

Q.5 Some oranges were purchased at ₹150 per hundred and sold at ₹24 per dozen. It gave a gain of ₹1,000. How many oranges were purchased?

- Ans**
- 1. 3000
 - 2. 2500
 - 3. 1500
 - 4. 2000

Question ID : 264330156074
Option 1 ID : 264330611696
Option 2 ID : 264330611698
Option 3 ID : 264330611697
Option 4 ID : 264330611695
Status : Answered
Chosen Option : 2

Q.6 The average weight of 20 students in a class is 55 kg. If the weight of the class teacher is included, the average is increased by 0.5 kg. The weight of the class teacher is:

- Ans**
- 1. 67.2 kg
 - 2. 63.5 kg
 - 3. 65.5 kg
 - 4. 68.4 kg

Question ID : 264330155954
Option 1 ID : 264330611216
Option 2 ID : 264330611217
Option 3 ID : 264330611218
Option 4 ID : 264330611215
Status : Answered
Chosen Option : 3

Q.7 15 kg of ₹25 per kg wheat is mixed with 10 kg of another type of wheat to get a mixture costing ₹30 per kg. Find the price (per kg) of the costlier wheat.

- Ans**
- 1. ₹37.5
 - 2. ₹32.5
 - 3. ₹35.5
 - 4. ₹30.5

Question ID : 264330156213
Option 1 ID : 264330612254
Option 2 ID : 264330612252
Option 3 ID : 264330612253
Option 4 ID : 264330612251
Status : Answered
Chosen Option : 2

Q.8 A and B can do a piece of work in 5 days, while C and D can do the same work in 20 days. In how many days will A, B, C and D do it together?

- Ans**
- 1. 3
 - 2. 4
 - 3. 5
 - 4. 6

Question ID : 264330156116
Option 1 ID : 264330611863
Option 2 ID : 264330611865
Option 3 ID : 264330611864
Option 4 ID : 264330611866
Status : Answered
Chosen Option : 2

Q.9 A milk vendor has 2 vessels of milk and water. The first contains 80% milk and the rest is water. The second contains 50% milk. How much mixture (in L) should he mix from each of the vessels so as to get 9 litres of mixture such that the ratio of water to milk is 1 : 2? (Write your answer in the order of vessel 1 and vessel 2)

- Ans**
- 1. 6, 3
 - 2. 4, 5
 - 3. 3, 6
 - 4. 5, 4

Question ID : 264330153760

Option 1 ID : 264330602503

Option 2 ID : 264330602505

Option 3 ID : 264330602504

Option 4 ID : 264330602506

Status : Answered

Chosen Option : 2

Q.10 On what sum of money will the difference between the simple interest and compound interest (Compounded annually) for 3 years at 5% per annum be ₹15,25?

- Ans**
- 1. ₹2,500
 - 2. ₹1,000
 - 3. ₹4,000
 - 4. ₹2,000

Question ID : 264330156345

Option 1 ID : 264330612782

Option 2 ID : 264330612781

Option 3 ID : 264330612779

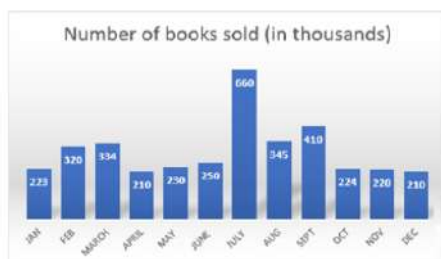
Option 4 ID : 264330612780

Status : Answered

Chosen Option : 1

Q.11 Study the given bar-graph and answer the question that follows.

The bar-graph presents the number of books sold by a bookseller during different months of a particular year.



The number of books sold in the month of December is how much less than the average number of books sold per month?

- Ans**
- 1. 120
 - 2. 93
 - 3. 39
 - 4. 95

Question ID : 264330153819

Option 1 ID : 264330602742

Option 2 ID : 264330602739

Option 3 ID : 264330602741

Option 4 ID : 264330602740

Status : Not Attempted and Marked For Review

Chosen Option : --

Q.12 The length of an edge of a cube is 3.5 cm. Find its total surface area.

- Ans 1. 73.5 cm^2
 2. 36 cm^2
 3. 27 cm^2
 4. 154 cm^2

Question ID : 264330156086
Option 1 ID : 264330611743
Option 2 ID : 264330611745
Option 3 ID : 264330611744
Option 4 ID : 264330611746
Status : Answered
Chosen Option : 1

Q.13 Study the given table and answer the question that follows.

The table shows the milk exported from India from 2011 to 2015.

Year	Quantity (in lakh litres)	Value (in ₹ crores)
2011	130	240
2012	115	220
2013	142	420
2014	165	550
2015	195	610

In which year is the value per litre the maximum?

- Ans 1. 2012
 2. 2014
 3. 2015
 4. 2013

Question ID : 264330157334
Option 1 ID : 264330616699
Option 2 ID : 264330616701
Option 3 ID : 264330616702
Option 4 ID : 264330616700
Status : Answered
Chosen Option : 3

Q.14 A family spends 20% of its monthly income on house rent. Out of the remaining amount, the family spends 50% on household expenditure and 20% on children's education. If after doing so, its monthly saving is ₹6,600, then what is the total monthly income of the family?

- Ans**
- 1. ₹25,000
 - 2. ₹27,500
 - 3. ₹30,000
 - 4. ₹28,000

Question ID : 264330154121
Option 1 ID : 264330603947
Option 2 ID : 264330603949
Option 3 ID : 264330603950
Option 4 ID : 264330603948
Status : Answered
Chosen Option : 2

Q.15 If $6\frac{1}{2} \times 2\frac{4}{5} \div x = \frac{7}{10}$, then find x :

- Ans**
- 1. 26
 - 2. 6
 - 3. 32
 - 4. 12

Question ID : 264330153867
Option 1 ID : 264330602932
Option 2 ID : 264330602931
Option 3 ID : 264330602934
Option 4 ID : 264330602933
Status : Answered
Chosen Option : 1

Q.16 Two numbers are in the ratio of 13 : 15. If their HCF is 3, then what is the difference between these two numbers?

- Ans**
- 1. 4
 - 2. 2
 - 3. 8
 - 4. 6

Question ID : 264330155681
Option 1 ID : 264330610128
Option 2 ID : 264330610127
Option 3 ID : 264330610130
Option 4 ID : 264330610129
Status : Answered
Chosen Option : 4

Q.17 A and B can complete a task in 6 and 8 days, respectively. They work on alternate days, with A starting the task on the first day. How many days will it take them to complete the task?

Ans 1. 6

2. $6\frac{3}{4}$

3. $6\frac{1}{2}$

4. $6\frac{1}{4}$

Question ID : 264330156280

Option 1 ID : 264330612519

Option 2 ID : 264330612522

Option 3 ID : 264330612521

Option 4 ID : 264330612520

Status : Answered

Chosen Option : 4

Q.18 In how many years will ₹2,000 invested at the rate of 11% p.a. simple interest, amount to ₹3,100?

Ans 1. 3

2. 4

3. 2

4. 5

Question ID : 264330156226

Option 1 ID : 264330612304

Option 2 ID : 264330612305

Option 3 ID : 264330612303

Option 4 ID : 264330612306

Status : Answered

Chosen Option : 1

Q.19 If the diameter of the base of a cone is 70 cm and its curved surface area is 4070 cm^2 , then what will be its volume (in cm^3)? (use $\pi = \frac{22}{7}$)

Ans 1. 1180

2. 16,300

3. 15,400

4. 17,600

Question ID : 264330156539

Option 1 ID : 264330613543

Option 2 ID : 264330613544

Option 3 ID : 264330613546

Option 4 ID : 264330613545

Status : Answered

Chosen Option : 2

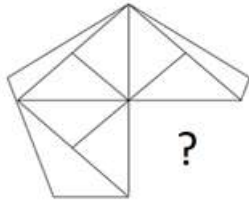
Q.20 The ratio of the number of boys to the number of girls in a school of 1650 students is 6 : 5. If 124 new boys are admitted and few new girls are admitted, the ratio changes to 4 : 3. What is the ratio of the newly admitted girls to the newly admitted boys?

- Ans**
- 1. 3 : 4
 - 2. 62 : 9
 - 3. 4 : 3
 - 4. 9 : 62

Question ID : **264330156307**
 Option 1 ID : **264330612628**
 Option 2 ID : **264330612629**
 Option 3 ID : **264330612627**
 Option 4 ID : **264330612630**
 Status : **Answered**
 Chosen Option : **2**

Section : Reasoning Ability and Problem Solving

Q.1 Identify the figure that completes the pattern (rotation is NOT allowed).



- Ans**
- 1.
 - 2.
 - 3.
 - 4.

Question ID : **264330154516**
 Option 1 ID : **264330605528**
 Option 2 ID : **264330605530**
 Option 3 ID : **264330605527**
 Option 4 ID : **264330605529**
 Status : **Answered**
 Chosen Option : **3**

Q.2 8 is related to 59 following a certain logic. Following the same logic, 9 is related to 76. To which of the following is 25 related to, following the same logic?

- Ans**
- 1. 620
 - 2. 635
 - 3. 630
 - 4. 625

Question ID : 264330151599
Option 1 ID : 264330594023
Option 2 ID : 264330594026
Option 3 ID : 264330594025
Option 4 ID : 264330594024
Status : Answered
Chosen Option : 1

Q.3 What will come in the place of '?' in the following equation, if '+' and '-' are interchanged and '×' and '÷' are interchanged?
 $108 \times 9 + 15 - 17 + 2 = ?$

- Ans**
- 1. 51
 - 2. 21
 - 3. 41
 - 4. 31

Question ID : 264330155665
Option 1 ID : 264330610066
Option 2 ID : 264330610065
Option 3 ID : 264330610063
Option 4 ID : 264330610064
Status : Answered
Chosen Option : 4

Q.4 In a certain code language, 'ENTRUST' is coded as 'FOURVTU' and 'CUSHION' is coded as 'DVTHJPO'. What is the code for 'CLEAVER' in the given code language?

- Ans**
- 1. DMFAWFS
 - 2. DNGBWGT
 - 3. ENGBWT
 - 4. EMFBWGT

Question ID : 264330155826
Option 1 ID : 264330610709
Option 2 ID : 264330610710
Option 3 ID : 264330610708
Option 4 ID : 264330610707
Status : Answered
Chosen Option : 1

Q.5 What should come in place of '?' in the given series?

2 21 97 401 1617 ?

- Ans**
- 1. 6481
 - 2. 6507
 - 3. 6235
 - 4. 6493

Question ID : 264330151470
 Option 1 ID : 264330593508
 Option 2 ID : 264330593510
 Option 3 ID : 264330593507
 Option 4 ID : 264330593509
 Status : Answered
 Chosen Option : 4

Q.6 Read the given statements and conclusions carefully. You have to take the given statements to be true even if they seem to be at variance from commonly known facts. You have to decide which conclusion/s logically follow/s from the given statements.

Statements: All shoes are leather. Some leather are belts. Some belts are gold.

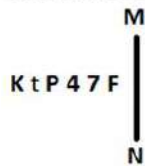
Conclusion I: Some shoes are belts.

Conclusion II: All belts are gold.

- Ans**
- 1. Neither conclusion (I) nor (II) is follow.
 - 2. Only conclusion (I) is follow.
 - 3. Only conclusion (II) is follow.
 - 4. Both conclusions (I) and (II) are follow.

Question ID : 264330155935
 Option 1 ID : 264330611145
 Option 2 ID : 264330611143
 Option 3 ID : 264330611144
 Option 4 ID : 264330611146
 Status : Answered
 Chosen Option : 1

Q.7 Select the correct mirror image of the given figure when the mirror is placed at MN as shown below.



- Ans**
- 1. K t P 4 7 F
 - 2. F 7 4 t P K
 - 3. F 7 4 P t K
 - 4. F 7 4 P t K

Question ID : 264330151526
 Option 1 ID : 264330593733
 Option 2 ID : 264330593734
 Option 3 ID : 264330593732
 Option 4 ID : 264330593731
 Status : Answered
 Chosen Option : 3

Q.8 Read the given statements and conclusions carefully. You have to take the given statements to be true even if they seem to be at variance from commonly known facts. You have to decide which conclusion/s logically follow/s from the given statements.

Statements: Some leaves are old. All old are clothes. Some clothes are papers.

Conclusion I: All leaves are old.

Conclusion II: Some old are clothes.

- Ans**
- 1. Only conclusion (I) is follow.
 - 2. Both conclusions (I) and (II) are follow.
 - 3. Only conclusion (II) is follow.
 - 4. Neither conclusion (I) nor (II) is follow.

Question ID : 264330155906

Option 1 ID : 264330611027

Option 2 ID : 264330611030

Option 3 ID : 264330611028

Option 4 ID : 264330611029

Status : Answered

Chosen Option : 3

Q.9 What should come in place of ? in the given series based on the English alphabetical order?

GAR, KEV, OIZ, SMD, ?

- Ans**
- 1. WPH
 - 2. WQH
 - 3. VRF
 - 4. VPG

Question ID : 264330155766

Option 1 ID : 264330610467

Option 2 ID : 264330610470

Option 3 ID : 264330610468

Option 4 ID : 264330610469

Status : Answered

Chosen Option : 2

Q.10 What should come in place of ? in the given series?

710 720 730 740 750 ?

- Ans**
- 1. 770
 - 2. 780
 - 3. 790
 - 4. 760

Question ID : 264330151548

Option 1 ID : 264330593821

Option 2 ID : 264330593822

Option 3 ID : 264330593819

Option 4 ID : 264330593820

Status : Answered

Chosen Option : 4

Q.11 What should come in place of the question mark (?) in the given series based on the English alphabetical order?

AOS, DMV, GKY, JIB, ?

- Ans**
- 1. MGE
 - 2. NGF
 - 3. NHF
 - 4. OHE

Question ID : **264330156299**
 Option 1 ID : **264330612596**
 Option 2 ID : **264330612595**
 Option 3 ID : **264330612597**
 Option 4 ID : **264330612598**
 Status : **Answered**
 Chosen Option : **1**

Q.12 What should come in place of '?' in the given series?

18 32 60 116 228 ?

- Ans**
- 1. 452
 - 2. 474
 - 3. 480
 - 4. 468

Question ID : **264330151496**
 Option 1 ID : **264330593611**
 Option 2 ID : **264330593613**
 Option 3 ID : **264330593614**
 Option 4 ID : **264330593612**
 Status : **Answered**
 Chosen Option : **1**

Q.13 If 'T' stands for '+', 'J' stands for '×', 'K' stands for '÷' and 'L' stands for '-', what will come in place of the question mark (?) in the following equation?
 (48 K 8) J 4 L 15 I (12 J 3) I 20 = ?

- Ans**
- 1. 55
 - 2. 65
 - 3. 60
 - 4. 70

Question ID : **264330151789**
 Option 1 ID : **264330594783**
 Option 2 ID : **264330594785**
 Option 3 ID : **264330594784**
 Option 4 ID : **264330594786**
 Status : **Answered**
 Chosen Option : **2**

Q.14 In a certain code language, 'let it be' is coded as 'sd am ht' and 'be the change' is coded as 'vn sd ek'. How is 'be' coded in the given language?

- Ans**
- 1. sd
 - 2. ht
 - 3. ek
 - 4. vn

Question ID : 264330151709
Option 1 ID : 264330594464
Option 2 ID : 264330594463
Option 3 ID : 264330594465
Option 4 ID : 264330594466
Status : Answered
Chosen Option : 1

Q.15 TDWP is related to RBUN in a certain way based on the English alphabetical order. In the same way, FJMH is related to DHKF. To which of the following is SENP related to, following the same logic?

- Ans**
- 1. PDKN
 - 2. QCLN
 - 3. RCMN
 - 4. QDKO

Question ID : 264330151662
Option 1 ID : 264330594276
Option 2 ID : 264330594278
Option 3 ID : 264330594277
Option 4 ID : 264330594275
Status : Answered
Chosen Option : 2

Q.16 Select the combination of letters that when sequentially placed in the blanks of the given series will make it logically complete.

DZL_G_JD_ZHDM_FDPZ_D

- Ans**
- 1. DNMVH
 - 2. KJBVD
 - 3. NVKDM
 - 4. DZJZD

Question ID : 264330156318
Option 1 ID : 264330612672
Option 2 ID : 264330612674
Option 3 ID : 264330612671
Option 4 ID : 264330612673
Status : Answered
Chosen Option : 4

Q.17 D, E, F, G, H, I, J and K are sitting around a square table facing the center of the table. Some of them are sitting at the corners while some are sitting at the exact center of the sides. K sits third to the right of I. K sits at one of the corners. E sits second to the left of G. G sits at any of the corners. E is an immediate neighbour of I and D. F sits third to the right of J. H is the immediate neighbour of F and K.

How many people sit between I and F, when counted from the left of I?

- Ans**
- 1. Two
 - 2. Four
 - 3. One
 - 4. Three

Question ID : 264330155533
 Option 1 ID : 264330609536
 Option 2 ID : 264330609538
 Option 3 ID : 264330609535
 Option 4 ID : 264330609537
 Status : Answered
 Chosen Option : 1

Q.18 Which figure should replace the question mark (?) if the following figure series were to be continued?

D			6			A			T			
A	P	T	D	3	P	L	D	3	A	6	D	?
6			3			A			T			

Ans

1.

3		
6	D	S
T		L

2.

3		
6	D	A
T		L

3.

L		
S	A	6
3		T

4.

L		
D	A	6
3		T

Question ID : 264330154742
 Option 1 ID : 264330606432
 Option 2 ID : 264330606433
 Option 3 ID : 264330606434
 Option 4 ID : 264330606431
 Status : Answered
 Chosen Option : 3

Q.19 If 11 December 2009 is a Friday, then what will be the day of the week on 18 December 2014?

- Ans**
- 1. Tuesday
 - 2. Monday
 - 3. Thursday
 - 4. Wednesday

Question ID : 264330154351
Option 1 ID : 264330604868
Option 2 ID : 264330604867
Option 3 ID : 264330604869
Option 4 ID : 264330604870
Status : Answered
Chosen Option : 3

Q.20 8 is related to 88 following a certain logic. Following the same logic, 11 is related to 121. To which of the following is 15 related to, following the same logic?

- Ans**
- 1. 163
 - 2. 165
 - 3. 164
 - 4. 162

Question ID : 264330151589
Option 1 ID : 264330593984
Option 2 ID : 264330593986
Option 3 ID : 264330593985
Option 4 ID : 264330593983
Status : Answered
Chosen Option : 2

Section : General Awareness

Q.1 According to Census of India 2011, what was the total population of India (approx)?

- Ans**
- 1. 131 Crore
 - 2. 121 Crore
 - 3. 111 Crore
 - 4. 101 Crore

Question ID : 264330161549
Option 1 ID : 264330633526
Option 2 ID : 264330633524
Option 3 ID : 264330633523
Option 4 ID : 264330633525
Status : Answered
Chosen Option : 2

Q.2

Chhau is a major dance tradition of India. In which of the following Indian states is the dance form NOT prevalent?

- Ans
- 1. Odisha
 - 2. West Bengal
 - 3. Jharkhand
 - 4. Madhya Pradesh

Question ID : 264330161343

Option 1 ID : 264330632699

Option 2 ID : 264330632702

Option 3 ID : 264330632700

Option 4 ID : 264330632701

Status : Answered

Chosen Option : 4

Q.3 In November 2022, which state became the first North-East state to approve Mental Health and Social Care Policy?

- Ans
- 1. Assam
 - 2. Meghalaya
 - 3. Tripura
 - 4. Arunachal Pradesh

Question ID : 264330158332

Option 1 ID : 264330620689

Option 2 ID : 264330620688

Option 3 ID : 264330620687

Option 4 ID : 264330620690

Status : Answered

Chosen Option : 3

Q.4 In which state is Vishakhapatnam Port located?

- Ans
- 1. Maharashtra
 - 2. Andhra Pradesh
 - 3. Odisha
 - 4. Gujarat

Question ID : 264330160143

Option 1 ID : 264330627911

Option 2 ID : 264330627912

Option 3 ID : 264330627914

Option 4 ID : 264330627913

Status : Answered

Chosen Option : 2

Q.5 Who among the following is the Indian classical dancer who masters both Bharatanatyam and Odissi dancing style?

- Ans
- 1. Shovana Narayan
 - 2. Guru Bipin Singh
 - 3. Padma Subrahmanayam
 - 4. Sonal Mansingh

Question ID : 264330159064
Option 1 ID : 264330623616
Option 2 ID : 264330623615
Option 3 ID : 264330623618
Option 4 ID : 264330623617
Status : Answered
Chosen Option : 2

Q.6 Which bacteria was discovered by Barry Marshall and Robin Warren that colonises the human stomach and causes chronic superficial gastritis ulcers?

- Ans
- 1. Campylobacter jejuni
 - 2. Helicobacter pylori
 - 3. Neisseria gonorrhoeae
 - 4. Entamoeba histolytica

Question ID : 264330161076
Option 1 ID : 264330631637
Option 2 ID : 264330631636
Option 3 ID : 264330631635
Option 4 ID : 264330631638
Status : Answered
Chosen Option : 1

Q.7 Which of the following states witnesses the first onset of the monsoon?

- Ans
- 1. Punjab
 - 2. Haryana
 - 3. Kerala
 - 4. Uttar Pradesh

Question ID : 264330157826
Option 1 ID : 264330618663
Option 2 ID : 264330618666
Option 3 ID : 264330618664
Option 4 ID : 264330618665
Status : Answered
Chosen Option : 3

Q.8 What is a prominent trend in the microfinance sector in India?

- Ans** 1. Integration of mobile banking services
 2. Excessive bureaucracy in loan approvals
 3. Decreased reliance on digital technology
 4. Limited focus on women entrepreneurs

Question ID : 264330157293
Option 1 ID : 264330616537
Option 2 ID : 264330616538
Option 3 ID : 264330616535
Option 4 ID : 264330616536
Status : Answered
Chosen Option : 2

Q.9 Ustad Bismillah Khan was associated with which of the following musical instruments?

- Ans** 1. Shehnai
 2. Sarod
 3. Sitar
 4. Sarangi

Question ID : 264330155508
Option 1 ID : 264330609437
Option 2 ID : 264330609435
Option 3 ID : 264330609438
Option 4 ID : 264330609436
Status : Answered
Chosen Option : 1

Q.10 The famous coal mining region 'Korba' is located in which state of India?

- Ans** 1. Kerala
 2. Tamil Nadu
 3. Chhattisgarh
 4. Himachal Pradesh

Question ID : 264330161525
Option 1 ID : 264330633427
Option 2 ID : 264330633429
Option 3 ID : 264330633428
Option 4 ID : 264330633430
Status : Answered
Chosen Option : 3

Q.11 What do you mean by balanced budget?

- Ans** 1. Expenditure not equal to revenue
 2. Expenditure equal to revenue
 3. Expenditure more the revenue
 4. Expenditure is less than revenue

Question ID : 264330161453
Option 1 ID : 264330633141
Option 2 ID : 264330633139
Option 3 ID : 264330633142
Option 4 ID : 264330633140
Status : Answered
Chosen Option : 2

Q.12 Rajgir Mahotsav is a beautiful representation of history, religion, art and culture. It is a three-day celebration in _____.

- Ans
- 1. Madhya Pradesh
 - 2. Uttarakhand
 - 3. Uttar Pradesh
 - 4. Bihar

Question ID : 264330160834
Option 1 ID : 264330630667
Option 2 ID : 264330630670
Option 3 ID : 264330630669
Option 4 ID : 264330630668
Status : Answered
Chosen Option : 4

Q.13 The famous novel 'The God Of Small Things' is written by _____.

- Ans
- 1. Shashi Tharoor
 - 2. Ruskin Bond
 - 3. Vikram Seth
 - 4. Arundhati Roy

Question ID : 264330162284
Option 1 ID : 264330636466
Option 2 ID : 264330636464
Option 3 ID : 264330636465
Option 4 ID : 264330636463
Status : Answered
Chosen Option : 4

Q.14 The Men's Junior Hockey Asia Cup 2023, which was won by India, was held at _____.

- Ans
- 1. Saudi Arabia
 - 2. Oman
 - 3. Dubai
 - 4. Qatar

Question ID : 264330161147
Option 1 ID : 264330631922
Option 2 ID : 264330631919
Option 3 ID : 264330631920
Option 4 ID : 264330631921
Status : Answered
Chosen Option : 2

Q.15 In the context of the Revolt of 1857, Mangal Pandey belonged to which Bengal native Infantry?

- Ans
- 1. 34
 - 2. 52
 - 3. 70
 - 4. 64

Question ID : 264330162328
Option 1 ID : 264330636639
Option 2 ID : 264330636640
Option 3 ID : 264330636642
Option 4 ID : 264330636641
Status : Answered
Chosen Option : 1

Q.16 Which of the following countries did India beat in the final to win the 2021 SAFF Championship?

- Ans 1. Nepal
 2. Lebanon
 3. Maldives
 4. Kuwait

Question ID : 264330161137
Option 1 ID : 264330631882
Option 2 ID : 264330631881
Option 3 ID : 264330631880
Option 4 ID : 264330631879
Status : Answered
Chosen Option : 1

Q.17 Vinesh Phogat became the first Indian woman wrestler to win how many medals at World Championships?

- Ans 1. 6
 2. 5
 3. 2
 4. 3

Question ID : 264330158358
Option 1 ID : 264330620794
Option 2 ID : 264330620793
Option 3 ID : 264330620791
Option 4 ID : 264330620792
Status : Not Answered
Chosen Option : --

Q.18 What is the purpose of the Cultural and Educational Rights?

- Ans 1. To promote a particular religion
 2. To protect the language, culture, and religion of the minority communities
 3. To protect the majority community
 4. To prevent exploitation

Question ID : 264330162250
Option 1 ID : 264330636328
Option 2 ID : 264330636329
Option 3 ID : 264330636327
Option 4 ID : 264330636330
Status : Answered
Chosen Option : 2

Q.19 In optics, which term refers to the opening of the diaphragm of a lens that spatially limits the propagation of light?

- Ans 1. Collimator
 2. Aperture
 3. Apostilb
 4. Meniscus

Question ID : 264330161400
Option 1 ID : 264330632928
Option 2 ID : 264330632930
Option 3 ID : 264330632929
Option 4 ID : 264330632927
Status : Not Answered
Chosen Option : --

Q.20 Lata Mangeshkar was awarded by the India's highest civilian honour 'Bharat Ratna' in the year _____.

- Ans**
- 1. 2015
 - 2. 2019
 - 3. 2001
 - 4. 2009

Question ID : **264330155507**
Option 1 ID : **264330609433**
Option 2 ID : **264330609434**
Option 3 ID : **264330609431**
Option 4 ID : **264330609432**
Status : **Answered**
Chosen Option : **3**

Q.21 Nirmala Panikar received the Sangeet Natak Akademi Award-2019 (given in February 2023) for her contribution to _____ dance form.

- Ans**
- 1. Mohiniyattam
 - 2. Kuchipudi
 - 3. Kathak
 - 4. Bharatanatyam

Question ID : **264330155523**
Option 1 ID : **264330609495**
Option 2 ID : **264330609496**
Option 3 ID : **264330609498**
Option 4 ID : **264330609497**
Status : **Answered**
Chosen Option : **4**

Q.22 In which city is the Rajghat memorial situated?

- Ans**
- 1. Ahmedabad
 - 2. Surat
 - 3. Delhi
 - 4. Agra

Question ID : **264330160772**
Option 1 ID : **264330630422**
Option 2 ID : **264330630419**
Option 3 ID : **264330630421**
Option 4 ID : **264330630420**
Status : **Answered**
Chosen Option : **3**

Q.23 In the 1939 Tripuri Congress Presidential Election, Pattabhi Sitaramayya was defeated by:

- Ans**
- 1. Mahatma Gandhi
 - 2. Rajendra Prasad
 - 3. Subhas Chandra Bose
 - 4. Jawaharlal Nehru

Question ID : 264330162323
Option 1 ID : 264330636619
Option 2 ID : 264330636622
Option 3 ID : 264330636621
Option 4 ID : 264330636620
Status : Answered
Chosen Option : 3

Q.24 Whose autobiography is titled 'Waiting for a Visa'?

- Ans**
- 1. Dr. Ram Manohar Lohia
 - 2. Dr. Rajendra Prasad
 - 3. Dr. Bhimrao Ambedkar
 - 4. Dr. Kamal Ranadive

Question ID : 264330155449
Option 1 ID : 264330609201
Option 2 ID : 264330609199
Option 3 ID : 264330609202
Option 4 ID : 264330609200
Status : Answered
Chosen Option : 1

Q.25 In which year was the Jammu and Kashmir Reorganization Act passed?

- Ans**
- 1. 2019
 - 2. 2009
 - 3. 2015
 - 4. 2017

Question ID : 264330159928
Option 1 ID : 264330627062
Option 2 ID : 264330627061
Option 3 ID : 264330627059
Option 4 ID : 264330627060
Status : Answered
Chosen Option : 1

Q.1 Select the most appropriate option to fill in the blank.
The toddler decided to make a mess because he wanted to _____ the attention of its parents.

- Ans** 1. seek
 2. elicit
 3. please
 4. extract

Question ID : 264330152637
Option 1 ID : 264330598152
Option 2 ID : 264330598153
Option 3 ID : 264330598154
Option 4 ID : 264330598151
Status : Answered
Chosen Option : 1

Q.2 Select the most appropriate synonym of the given word.
Glimpse

- Ans** 1. Examine
 2. Glance
 3. Stare
 4. Observe

Question ID : 264330152596
Option 1 ID : 264330597989
Option 2 ID : 264330597987
Option 3 ID : 264330597988
Option 4 ID : 264330597990
Status : Answered
Chosen Option : 2

Q.3 Identify the sentence that contains correct spellings in the given context.

- Ans** 1. She acid the test despite being sleep-deprived from studying for nearly 24 hours straight.
 2. She acad the test desspite being sleep-deprived from studying for nearly 24 hours straight.
 3. She aced the test daspite being sleep-deprived from studying for nearly 24 hours strait.
 4. She aced the test despite being sleep-deprived from studying for nearly 24 hours straight.

Question ID : 264330153650
Option 1 ID : 264330602067
Option 2 ID : 264330602068
Option 3 ID : 264330602070
Option 4 ID : 264330602069
Status : Answered
Chosen Option : 4

Q.4 Select the most appropriate option to fill in the blank.
The teacher assured: "You have completed your homework, _____?"

- Ans
- 1. had you
 - 2. hadn't you
 - 3. haven't you
 - 4. have you

Question ID : 264330152641
Option 1 ID : 264330598170
Option 2 ID : 264330598169
Option 3 ID : 264330598167
Option 4 ID : 264330598168
Status : Answered
Chosen Option : 3

Q.5 Select the most appropriate ANTONYM of the word given in brackets to fill in the blank.
A _____ (distinct) sense of restlessness was bothering me when I left the cemetery.

- Ans
- 1. terrible
 - 2. critical
 - 3. prior
 - 4. vague

Question ID : 264330152697
Option 1 ID : 264330598393
Option 2 ID : 264330598391
Option 3 ID : 264330598394
Option 4 ID : 264330598392
Status : Answered
Chosen Option : 4

Q.6 The following sentence has been divided into parts. One of them may contain an error. Select the part that contains the error from the given options. If you don't find any error, mark 'No error' as your answer.
With cloud streaming, people can play games from a / internet-connected device, avoiding the need for pricey / dedicated hardware such as a game console.

- Ans
- 1. No error
 - 2. dedicated hardware such as a game console
 - 3. With cloud streaming, people can play games from a
 - 4. internet-connected device, avoiding the need for pricey

Question ID : 264330153196
Option 1 ID : 264330600346
Option 2 ID : 264330600345
Option 3 ID : 264330600343
Option 4 ID : 264330600344
Status : Answered
Chosen Option : 3

Q.7 Select the most appropriate meaning of the given idiom.
Keep someone at arm's length

- Ans 1. To ruin someone's plans
 2. To avoid becoming too close or friendly with someone
 3. Angry about something
 4. Having energy again after being tired

Question ID : 264330155283
Option 1 ID : 264330608577
Option 2 ID : 264330608578
Option 3 ID : 264330608575
Option 4 ID : 264330608576
Status : Answered
Chosen Option : 2

Q.8 The following sentence has been divided into four parts. Identify the part that contains an error.
(A) This fridge / (B) comes including / (C) a 5-year / (D) warranty.

- Ans 1. B
 2. C
 3. D
 4. A

Question ID : 264330152615
Option 1 ID : 264330598066
Option 2 ID : 264330598065
Option 3 ID : 264330598063
Option 4 ID : 264330598064
Status : Answered
Chosen Option : 1

Q.9 Select the option that can be used as a one-word substitute for the given group of words.
One who looks at the dark side of life

- Ans 1. Physicist
 2. Optimist
 3. Pessimist
 4. Idealist

Question ID : 264330153361
Option 1 ID : 264330600996
Option 2 ID : 264330600997
Option 3 ID : 264330600998
Option 4 ID : 264330600995
Status : Answered
Chosen Option : 3

Q.10 Select the most appropriate option that can substitute the underlined segment in the given sentence.

Many a things are used for the show.

- Ans
- 1. a things is
 - 2. a things were
 - 3. a thing is
 - 4. a thing were

Question ID : 264330153350
Option 1 ID : 264330600954
Option 2 ID : 264330600951
Option 3 ID : 264330600953
Option 4 ID : 264330600952
Status : Answered
Chosen Option : 3

Q.11 Select the most appropriate option that can rectify the underlined segment in the given sentence. If there is no need to rectify it, select 'no rectification needed'.

This film is a non-stop riot that many cite as one of the funny films of all time.

- Ans
- 1. no rectification needed
 - 2. funniest
 - 3. more funny
 - 4. funnier

Question ID : 264330153467
Option 1 ID : 264330601386
Option 2 ID : 264330601383
Option 3 ID : 264330601384
Option 4 ID : 264330601385
Status : Answered
Chosen Option : 2

Q.12 Select the INCORRECTLY spelt word.

- Ans
- 1. Essence
 - 2. Aggregate
 - 3. Transmissible
 - 4. Assembly

Question ID : 264330152781
Option 1 ID : 264330598718
Option 2 ID : 264330598717
Option 3 ID : 264330598715
Option 4 ID : 264330598716
Status : Answered
Chosen Option : 3

Q.13 Select the option that can be used as a one-word substitute for the given group of words.

A person who regards the whole world as his country

- Ans 1. Cosmopolitan
 2. Pacifist
 3. Contemporary
 4. Celibate

Question ID : 264330153537
Option 1 ID : 264330601653
Option 2 ID : 264330601652
Option 3 ID : 264330601651
Option 4 ID : 264330601654
Status : Answered
Chosen Option : 1

Q.14 The following sentence has been split into four segments. Identify the segment that contains an error.

The team played / really well, but / they lose the game / in the final minutes.

- Ans 1. really well, but
 2. in the final minutes
 3. they lose the game
 4. The team played

Question ID : 264330155320
Option 1 ID : 264330608720
Option 2 ID : 264330608722
Option 3 ID : 264330608721
Option 4 ID : 264330608719
Status : Answered
Chosen Option : 3

Q.15 The following sentence has been split into four segments. Identify the segment that contains an error.

The school shall reopened / after summer / vacations of / one month.

- Ans 1. one month
 2. vacations of
 3. The school shall reopened
 4. after summer

Question ID : 264330151287
Option 1 ID : 264330592786
Option 2 ID : 264330592785
Option 3 ID : 264330592783
Option 4 ID : 264330592784
Status : Answered
Chosen Option : 3

Q.16 Select the most appropriate ANTONYM of the underlined word.
They waited with anxiety for the final results.

- Ans
- 1. Shrewdness
 - 2. Wilderness
 - 3. Feebleness
 - 4. Calmness

Question ID : 264330151817
Option 1 ID : 264330594896
Option 2 ID : 264330594898
Option 3 ID : 264330594897
Option 4 ID : 264330594895
Status : Answered
Chosen Option : 4

Q.17 Select the most appropriate idiom to fill in the blank.
Jack took on three jobs at once but soon realised he had _____.

- Ans
- 1. cut corners
 - 2. taken it with a grain of salt
 - 3. bitten off more than he could chew
 - 4. played by the ear

Question ID : 264330151883
Option 1 ID : 264330595152
Option 2 ID : 264330595154
Option 3 ID : 264330595151
Option 4 ID : 264330595153
Status : Answered
Chosen Option : 3

Q.18 Select the most appropriate idiom to fill in the blank.
The CEO has _____ than worrying about individual customer complaints.

- Ans
- 1. bigger fish to fry
 - 2. taken a rain check
 - 3. thrown caution to the wind
 - 4. been walking on thin ice

Question ID : 264330151888
Option 1 ID : 264330595172
Option 2 ID : 264330595173
Option 3 ID : 264330595174
Option 4 ID : 264330595171
Status : Answered
Chosen Option : 1

Q.19 Select the INCORRECTLY spelt word.

- Ans
- 1. Perceive
 - 2. Recognition
 - 3. Vaccum
 - 4. Shield

Question ID : 264330152827
Option 1 ID : 264330598902
Option 2 ID : 264330598899
Option 3 ID : 264330598901
Option 4 ID : 264330598900
Status : Answered
Chosen Option : 3

Q.20 Select the most appropriate idiom to fill in the blank.

I know it was wrong to distract his friends, but _____.

- Ans 1. all's fair in love and war
 2. all's unfair in the world
 3. all's unfair in love and war
 4. all's fair in the world

Question ID : 264330153077

Option 1 ID : 264330599873

Option 2 ID : 264330599874

Option 3 ID : 264330599871

Option 4 ID : 264330599872

Status : Answered

Chosen Option : 1

Comprehension:

In the following passage, some words have been deleted. Read the passage carefully and select the most appropriate option to fill in each blank.

(1)___ the breakfast table the next morning, there was no sign of my wife. I (2)___ she was sleeping late, but Gladolia, upon being questioned, only (3)___ her head, (4)___ something, and turned the whites of her eyes up to the ceiling. I was glad when the meal was (5)___ and hurried to the library for another try at that story.

SubQuestion No : 21

Q.21 Select the most appropriate option to fill in blank no. 1.

- Ans 1. On
 2. Above
 3. Upon
 4. At

Question ID : 264330151849

Option 1 ID : 264330595015

Option 2 ID : 264330595018

Option 3 ID : 264330595016

Option 4 ID : 264330595017

Status : Answered

Chosen Option : 4

Comprehension:

In the following passage, some words have been deleted. Read the passage carefully and select the most appropriate option to fill in each blank.

(1)___ the breakfast table the next morning, there was no sign of my wife. I (2)___ she was sleeping late, but Gladolia, upon being questioned, only (3)___ her head, (4)___ something, and turned the whites of her eyes up to the ceiling. I was glad when the meal was (5)___ and hurried to the library for another try at that story.

SubQuestion No : 22

Q.22 Select the most appropriate option to fill in blank no. 2.

- Ans 1. accepted
 2. decided
 3. examined
 4. concluded

Question ID : 264330151850

Option 1 ID : 264330595020

Option 2 ID : 264330595019

Option 3 ID : 264330595021

Option 4 ID : 264330595022

Status : Answered

Chosen Option : 4

Comprehension:

In the following passage, some words have been deleted. Read the passage carefully and select the most appropriate option to fill in each blank.

(1)___ the breakfast table the next morning, there was no sign of my wife. I (2)___ she was sleeping late, but Gladolia, upon being questioned, only (3)___ her head, (4)___ something, and turned the whites of her eyes up to the ceiling. I was glad when the meal was (5)___ and hurried to the library for another try at that story.

SubQuestion No : 23

Q.23 Select the most appropriate option to fill in blank no. 3.

- Ans 1. adjusted
 2. rotated
 3. shook
 4. stirred

Question ID : 264330151851

Option 1 ID : 264330595025

Option 2 ID : 264330595026

Option 3 ID : 264330595024

Option 4 ID : 264330595023

Status : Answered

Chosen Option : 3

Comprehension:

In the following passage, some words have been deleted. Read the passage carefully and select the most appropriate option to fill in each blank.

(1)___ the breakfast table the next morning, there was no sign of my wife. I (2)___ she was sleeping late, but Gladolia, upon being questioned, only (3)___ her head, (4)___ something, and turned the whites of her eyes up to the ceiling. I was glad when the meal was (5)___ and hurried to the library for another try at that story.

SubQuestion No : 24

Q.24 Select the most appropriate option to fill in blank no. 4.

- Ans 1. mugged
 2. muffed
 3. mutilated
 4. muttered

Question ID : 264330151852

Option 1 ID : 264330595028

Option 2 ID : 264330595029

Option 3 ID : 264330595030

Option 4 ID : 264330595027

Status : Answered

Chosen Option : 4

Comprehension:

In the following passage, some words have been deleted. Read the passage carefully and select the most appropriate option to fill in each blank.

(1)___ the breakfast table the next morning, there was no sign of my wife. I (2)___ she was sleeping late, but Gladolia, upon being questioned, only (3)___ her head, (4)___ something, and turned the whites of her eyes up to the ceiling. I was glad when the meal was (5)___ and hurried to the library for another try at that story.

SubQuestion No : 25

Q.25 Select the most appropriate option to fill in blank no. 5.

Ans 1. removed

2. over

3. through

4. undone

Question ID : **264330151853**

Option 1 ID : **264330595033**

Option 2 ID : **264330595031**

Option 3 ID : **264330595032**

Option 4 ID : **264330595034**

Status : **Answered**

Chosen Option : **2**

SSC MTS 2023 Tier 1 Sept 13 Shift 2 Question Paper with Answers

Roll Number	
Candidate Name	
Exam Date	13/09/2023
Exam Time	12:30 PM - 2:30 PM
Subject	MTS Non Tech Havaldar CBIC and CBN Examination 2023

Section : Numerical and Mathematical Ability

Q.1 A policeman sees a thief and starts chasing him. The distance between the thief and the policeman is 200 m and the speed of the thief is 8 km/h. If the policeman was able to catch the thief in 20 minutes, then the speed of the policeman is _____ km/h.

- Ans**
- 1. 8.4
 - 2. 9.2
 - 3. 8.6
 - 4. 8.2

Question ID : 264330153812

Option 1 ID : 264330602713

Option 2 ID : 264330602711

Option 3 ID : 264330602714

Option 4 ID : 264330602712

Status : Answered

Chosen Option : 3

Q.2 What sum of money (in ₹) will amount to ₹20,400 at the rate of 9% per annum simple interest in four years?

- Ans**
- 1. 18,000
 - 2. 12,000
 - 3. 20,000
 - 4. 15,000

Question ID : 264330156485

Option 1 ID : 264330613327

Option 2 ID : 264330613329

Option 3 ID : 264330613328

Option 4 ID : 264330613330

Status : Answered

Chosen Option : 4

Q.3 A medical store owner purchased medicines worth ₹18,000 from a company. He sold $\frac{2}{5}$ part of the medicine at a 35% loss. On which gain, he should sell the rest of the medicines so that he has neither gain nor loss?

- Ans**
1. $23\frac{2}{3}\%$
2. $20\frac{2}{3}\%$
3. $20\frac{1}{3}\%$
4. $23\frac{1}{3}\%$

Question ID : 264330155736

Option 1 ID : 264330610348

Option 2 ID : 264330610350

Option 3 ID : 264330610347

Option 4 ID : 264330610349

Status : Answered

Chosen Option : 4

Q.4 A mixture contains spirit and water in the ratio 3 : 2. If 2 litres of water is added to the mixture, the ratio becomes 5 : 4. Find the quantity of spirit in the mixture (in litres).

- Ans**
1. 15
2. 20
3. 25
4. 10

Question ID : 264330153844

Option 1 ID : 264330602840

Option 2 ID : 264330602839

Option 3 ID : 264330602841

Option 4 ID : 264330602842

Status : Answered

Chosen Option : 1

Q.5 A table showing the percentages of the total population of a Town by age group for the year 2016 is given below.

Age Group (in years)	Per cent
up to 15	35
16-30	18.5
30-40	12.5
40-50	25.77
51 and above	8.23

Out of every 1920 persons, the number of persons below 16 years is:

- Ans**
1. 672
2. 355
3. 312
4. 1027

Question ID : 264330153886

Option 1 ID : 264330603008

Option 2 ID : 264330603007

Option 3 ID : 264330603009

Option 4 ID : 264330603010

Status : Answered

Chosen Option : 1

Q.6 A number decreased by $\frac{75}{2}\%$ gives 378. What is the number?

- Ans
- 1. 606.4
 - 2. 608.0
 - 3. 603.2
 - 4. 604.8

Question ID : 264330155698
Option 1 ID : 264330610197
Option 2 ID : 264330610198
Option 3 ID : 264330610195
Option 4 ID : 264330610196
Status : Answered
Chosen Option : 4

Q.7 The LCM of the two numbers is 1440 and their HCF is 32. If the first number is 288, then find the second number.

- Ans
- 1. 150
 - 2. 145
 - 3. 180
 - 4. 160

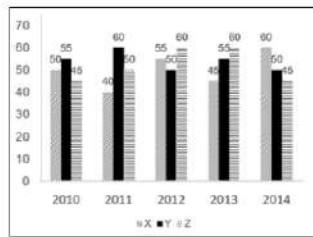
Question ID : 264330155724
Option 1 ID : 264330610300
Option 2 ID : 264330610301
Option 3 ID : 264330610302
Option 4 ID : 264330610299
Status : Answered
Chosen Option : 4

Q.8 A lady travels a distance of 150 metres in 30 minutes and the next 350 metres in 50 minutes. Her average speed during the whole journey is:

- Ans
- 1. $\frac{21}{24}$ km/h
 - 2. $\frac{11}{24}$ km/h
 - 3. $\frac{9}{24}$ km/h
 - 4. $\frac{7}{24}$ km/h

Question ID : 264330156513
Option 1 ID : 264330613441
Option 2 ID : 264330613439
Option 3 ID : 264330613440
Option 4 ID : 264330613442
Status : Answered
Chosen Option : 3

- Q.9** The graph shows the production of tyres (in Lakhs) by three different companies X, Y, and Z over the years.
Directions: Study the following graph carefully to answer the question given below it.



What is the difference between the production of company Z in 2010 and the production of company X in 2014?

- Ans**
- 1. 20 lakhs
 - 2. 15 lakhs
 - 3. 10 lakhs
 - 4. 5 lakhs

Question ID : 264330153888
 Option 1 ID : 264330603018
 Option 2 ID : 264330603016
 Option 3 ID : 264330603015
 Option 4 ID : 264330603017
 Status : Answered
 Chosen Option : 2

- Q.10** Three years ago, the value of car was ₹2,50,000. If the value depreciates by 6% every year, its value now is:

- Ans**
- 1. ₹2,04,676
 - 2. ₹2,07,646
 - 3. ₹2,07,466
 - 4. ₹2,04,766

Question ID : 264330153879
 Option 1 ID : 264330602981
 Option 2 ID : 264330602980
 Option 3 ID : 264330602979
 Option 4 ID : 264330602982
 Status : Answered
 Chosen Option : 2

- Q.11** The income of A and B are in the ratio of 5 : 4 and the income of B and C are in the ratio of 5 : 6. What is the ratio of incomes of A and C?

- Ans**
- 1. 5 : 6
 - 2. 24 : 25
 - 3. 25 : 24
 - 4. 6 : 5

Question ID : 264330153805
 Option 1 ID : 264330602685
 Option 2 ID : 264330602684
 Option 3 ID : 264330602683
 Option 4 ID : 264330602686
 Status : Answered
 Chosen Option : 3

Q.12 Find the volume a cube, each of whose sides measures 7 cm.

- Ans 1. 343 cm^3
 2. 282 cm^3
 3. 294 cm^3
 4. 49 cm^3

Question ID : 264330153895
Option 1 ID : 264330603045
Option 2 ID : 264330603044
Option 3 ID : 264330603046
Option 4 ID : 264330603043
Status : Answered
Chosen Option : 1

Q.13 A person crosses a 750 m long street in 5 minutes. Find his speed in km/h.

- Ans 1. 8.40
 2. 9.00
 3. 7.20
 4. 10.80

Question ID : 264330156365
Option 1 ID : 264330612860
Option 2 ID : 264330612861
Option 3 ID : 264330612859
Option 4 ID : 264330612862
Status : Answered
Chosen Option : 2

Q.14 While calculating the average marks of a class, the score increased by 0.5 when marks of one student is wrongly entered as 54 instead of 45. The number of students in the class is:

- Ans 1. 36
 2. 18
 3. 45
 4. 54

Question ID : 264330154041
Option 1 ID : 264330603630
Option 2 ID : 264330603629
Option 3 ID : 264330603628
Option 4 ID : 264330603627
Status : Answered
Chosen Option : 2

Q.15 Two cuboids of dimension $2 \times 3 \times 4$ units and $2 \times 5 \times 4$ units are melted and a single cube is made. What is the side of the cube in units?

- Ans
- 1. 3.5
 - 2. 3.0
 - 3. 4.0
 - 4. 2.5

Question ID : 264330153828

Option 1 ID : 264330602777

Option 2 ID : 264330602776

Option 3 ID : 264330602778

Option 4 ID : 264330602775

Status : Answered

Chosen Option : 3

Q.16 Simplify the following expression.

$$\left(\frac{5}{3} + \frac{6}{5} \div \frac{18}{5}\right) \text{ of } \frac{5}{12} - \left(\frac{5}{6} \div \frac{5}{12}\right) \text{ of } \frac{5}{12} + \frac{2}{3} \text{ of } \frac{3}{2}$$

- Ans
- 1. 1
 - 2. $\frac{5}{6}$
 - 3. $\frac{6}{5}$
 - 4. 0

Question ID : 264330153832

Option 1 ID : 264330602792

Option 2 ID : 264330602793

Option 3 ID : 264330602794

Option 4 ID : 264330602791

Status : Answered

Chosen Option : 1

Q.17 A can complete a piece of work in 40 days and B can complete the same work in 60 days. They work together for 8 days. How much work is left?

- Ans
- 1. $\frac{2}{5}$
 - 2. $\frac{1}{5}$
 - 3. $\frac{2}{3}$
 - 4. $\frac{1}{3}$

Question ID : 264330155973

Option 1 ID : 264330611294

Option 2 ID : 264330611293

Option 3 ID : 264330611292

Option 4 ID : 264330611291

Status : Answered

Chosen Option : 3

Q.18 Ramesh purchased a bag for ₹1,275 and sold it at a gain of 15% but calculated on the selling price. Find the selling price of the bag.

- Ans
- 1. ₹1,325
 - 2. ₹1,400
 - 3. ₹1,475
 - 4. ₹1,500

Question ID : 264330158210
 Option 1 ID : 264330620199
 Option 2 ID : 264330620200
 Option 3 ID : 264330620201
 Option 4 ID : 264330620202
 Status : Answered
 Chosen Option : 3

Q.19 If the average marks of three sections of Class IX, having 25, 35 and 40 students, respectively, is 60, 70 and 80, then the average marks of all the students of Class IX is:

- Ans
- 1. 75
 - 2. 71.5
 - 3. 70.5
 - 4. 72

Question ID : 264330156467
 Option 1 ID : 264330613255
 Option 2 ID : 264330613256
 Option 3 ID : 264330613257
 Option 4 ID : 264330613258
 Status : Answered
 Chosen Option : 2

Q.20 A and B can do a piece of work in 5 days. B and C can do the same work in 8 days, while C and A can do it in 16 days. Find the time (in days) in which A, B and C can finish the work, working together.

- Ans
- 1. $5\frac{4}{31}$
 - 2. $4\frac{5}{31}$
 - 3. $5\frac{5}{17}$
 - 4. $5\frac{5}{31}$

Question ID : 264330155756
 Option 1 ID : 264330610428
 Option 2 ID : 264330610427
 Option 3 ID : 264330610430
 Option 4 ID : 264330610429
 Status : Answered
 Chosen Option : 4

Q.1 What should come in place of ? in the given series?

10 21 43 87 175 ?

- Ans
- 1. 308
 - 2. 351
 - 3. 376
 - 4. 367

Question ID : 264330151556

Option 1 ID : 264330593853

Option 2 ID : 264330593854

Option 3 ID : 264330593851

Option 4 ID : 264330593852

Status : Answered

Chosen Option : 2

Q.2 If 'P' stands for '×', 'Q' stands for '+', 'R' stands for '-' and 'S' stands for '÷', what will come in place of the question

mark (?) in the following equation?

9 P 9 R (7 P 3) S 24 R 6 P 2 = ?

- Ans
- 1. 76
 - 2. 72
 - 3. 63
 - 4. 54

Question ID : 264330151794

Option 1 ID : 264330594804

Option 2 ID : 264330594806

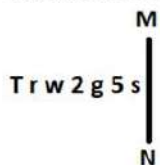
Option 3 ID : 264330594805

Option 4 ID : 264330594803

Status : Answered

Chosen Option : 2

Q.3 Select the correct mirror image of the given figure when the mirror is placed at MN as shown below.



- Ans
- 1. s5g2w1T
 - 2. 2g5w1T
 - 3. 2g5w1T
 - 4. 2g5w21T

Question ID : 264330151517

Option 1 ID : 264330593696

Option 2 ID : 264330593695

Option 3 ID : 264330593698

Option 4 ID : 264330593697

Status : Answered

Chosen Option : 3

Q.4 Select the word-pair that best represents a similar relationship to the one expressed in the pair of words given below.

(The words must be considered as meaningful English words and must not be related to each other based on the number of letters/number of consonants/vowels in the word)

Lava : Volcano

- Ans**
- 1. Avalanche : Ice
 - 2. Ice : Glass
 - 3. Steam : Geyser
 - 4. Cascade : Precipice

Question ID : 264330154637

Option 1 ID : 264330606014

Option 2 ID : 264330606011

Option 3 ID : 264330606013

Option 4 ID : 264330606012

Status : Answered

Chosen Option : 3

Q.5 In a certain code language, 'krishi might be coming' is written as 'gi ji hi fi' and 'prem will be going' is written as 'li mi ri hi'. How is 'be' written in the given language?

- Ans**
- 1. li
 - 2. ri
 - 3. hi
 - 4. mi

Question ID : 264330155636

Option 1 ID : 264330609947

Option 2 ID : 264330609950

Option 3 ID : 264330609949

Option 4 ID : 264330609948

Status : Answered

Chosen Option : 3

Q.6 What should come in place of ? in the given series?

16 20 28 40 56 ?

- Ans**
- 1. 78
 - 2. 69
 - 3. 75
 - 4. 76

Question ID : 264330151714

Option 1 ID : 264330594484

Option 2 ID : 264330594485

Option 3 ID : 264330594486

Option 4 ID : 264330594483

Status : Answered

Chosen Option : 4

Q.7 10 is related to 97 following a certain logic. Following the same logic, 12 is related to 141. To which of the following is 14 related to, following the same logic?

- Ans** 1. 193
 2. 191
 3. 194
 4. 192

Question ID : 264330151600
 Option 1 ID : 264330594029
 Option 2 ID : 264330594027
 Option 3 ID : 264330594030
 Option 4 ID : 264330594028
 Status : Answered
 Chosen Option : 1

Q.8 If F means '-', G means '×', D means '+', B means '÷', then what will come in place of the question mark (?) in the following equation?

$$15 G 10 D 30 B 43 F 28 = ?$$

- Ans** 1. 30
 2. 20
 3. 25
 4. 10

Question ID : 264330154683
 Option 1 ID : 264330606198
 Option 2 ID : 264330606196
 Option 3 ID : 264330606197
 Option 4 ID : 264330606195
 Status : Answered
 Chosen Option : 2

Q.9 What should come in place of '?' in the given series?

$$46 \ ? \ 358 \ 1060 \ 3166 \ 9484 \ 28438$$

- Ans** 1. 132
 2. 122
 3. 116
 4. 124

Question ID : 264330151444
 Option 1 ID : 264330593404
 Option 2 ID : 264330593403
 Option 3 ID : 264330593406
 Option 4 ID : 264330593405
 Status : Not Answered
 Chosen Option : --

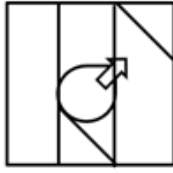
Q.10 Select the option figure in which the given figure (X) is embedded as its part (rotation is NOT allowed).



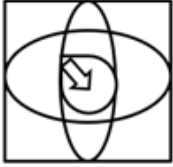
(X)

Ans

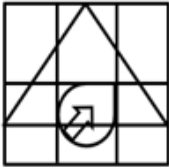
1.



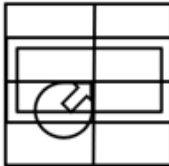
2.



3.



4.



Question ID : 264330151731

Option 1 ID : 264330594554

Option 2 ID : 264330594552

Option 3 ID : 264330594553

Option 4 ID : 264330594551

Status : Answered

Chosen Option : 4

Q.11 12 is related to 59 following a certain logic. Following the same logic, 17 is related to 84. To which of the following is 19 related to, following the same logic?

Ans 1. 91

2. 94

3. 93

4. 92

Question ID : 264330151588

Option 1 ID : 264330593979

Option 2 ID : 264330593982

Option 3 ID : 264330593981

Option 4 ID : 264330593980

Status : Answered

Chosen Option : 2

Q.12 In a certain code language, 'DEAF' is coded as '5718' and 'HEAD' is coded as '8137'. What is the code for 'H' in the given code language?

- Ans**
- 1. 1
 - 2. 3
 - 3. 8
 - 4. 7

Question ID : 264330151694
Option 1 ID : 264330594405
Option 2 ID : 264330594403
Option 3 ID : 264330594406
Option 4 ID : 264330594404
Status : Answered
Chosen Option : 2

Q.13 What should come in place of ? in the given series based on the English alphabetical order?

YIQ, AKR, CMS, EOT, ?

- Ans**
- 1. HPV
 - 2. GQU
 - 3. FPU
 - 4. FRV

Question ID : 264330155785
Option 1 ID : 264330610546
Option 2 ID : 264330610544
Option 3 ID : 264330610545
Option 4 ID : 264330610543
Status : Answered
Chosen Option : 2

Q.14 What should come in place of ? in the given series based on the English alphabetical order?

FQS, IUT, LYU, OCV, ?

- Ans**
- 1. QFV
 - 2. QHU
 - 3. SHV
 - 4. RGW

Question ID : 264330155798
Option 1 ID : 264330610595
Option 2 ID : 264330610597
Option 3 ID : 264330610598
Option 4 ID : 264330610596
Status : Answered
Chosen Option : 4

Q.15 Read the given statements and conclusions carefully. You have to take the given statements to be true even if they seem to be at variance from commonly known facts. You have to decide which conclusion/s logically follow/s from the given statements.

Statements: All wool is crochet. Some crochet are skirts. All skirts are bread.

Conclusion I: Some crochet is wool.

Conclusion II: Some bread is crochet.

- Ans**
- 1. Neither conclusion (I) nor (II) is follow.
 - 2. Only conclusion (I) is follow.
 - 3. Both conclusions (I) and (II) are follow.
 - 4. Only conclusion (II) is follow.

Question ID : 264330155933

Option 1 ID : 264330611137

Option 2 ID : 264330611135

Option 3 ID : 264330611138

Option 4 ID : 264330611136

Status : Answered

Chosen Option : 3

Q.16 K, L, M, N, O, P, Q and R are sitting around a square table facing the center of the table. Some of them are sitting at the corners while some are sitting at the exact center of the sides. R sits second to the right of Q. Q sits in one of the corners. M sits third to the left of N. M does not sit in any of the corners. O is the immediate neighbour of Q and R. K is not the neighbour of N. L sits third to the left of R.

How many people sit between K and Q, when counted from the right of K?

- Ans**
- 1. Two
 - 2. One
 - 3. Three
 - 4. Four

Question ID : 264330155537

Option 1 ID : 264330609552

Option 2 ID : 264330609551

Option 3 ID : 264330609553

Option 4 ID : 264330609554

Status : Answered

Chosen Option : 3

Q.17 Read the given statements and conclusions carefully. You have to take the given statements to be true even if they seem to be at variance from commonly known facts. You have to decide which conclusion/s logically follow/s from the given statements.

Statements: Some chairs are fans. All fans are pots. Some pots are hot.

Conclusion I: Some fans are chairs.

Conclusion II: Some hot are pots.

- Ans**
- 1. Only conclusion (I) is follow.
 - 2. Both conclusions (I) and (II) are follow.
 - 3. Only conclusion (II) is follow.
 - 4. Neither conclusion (I) nor (II) is follow.

Question ID : 264330155897

Option 1 ID : 264330610991

Option 2 ID : 264330610994

Option 3 ID : 264330610992

Option 4 ID : 264330610993

Status : Answered

Chosen Option : 2

Q.18 Select the combination of letters that when sequentially placed in the blanks of the given series, will complete the series.

P _ Q _ QQ _ _ Q P _ Q

- Ans**
- 1. PPQQP
 - 2. QPPQQ
 - 3. PPQPP
 - 4. QPQPQ

Question ID : 264330151651
 Option 1 ID : 264330594231
 Option 2 ID : 264330594232
 Option 3 ID : 264330594233
 Option 4 ID : 264330594234
 Status : Answered
 Chosen Option : 2

Q.19 Which figure should replace the question mark (?) if the following figure series were to be continued?

Z	7	4	=	?
B 4 7 =	= Z S B	S B = Z	Z 4 F S	?
S	4	F	B	

Ans

- 1.

S
= F 4 B
Z
- 2.

B
S Z 4 F
△
- 3.

B
F S 4 Z
△
- 4.

B
F S Z 4
△

Question ID : 264330154749
 Option 1 ID : 264330606459
 Option 2 ID : 264330606461
 Option 3 ID : 264330606462
 Option 4 ID : 264330606460
 Status : Answered
 Chosen Option : 3

Q.20 If 7th Nov 2005 is Monday, then what will be the day of the week on 17th Nov 2015?

- Ans**
- 1. Monday
 - 2. Tuesday
 - 3. Saturday
 - 4. Friday

Question ID : **264330154336**
Option 1 ID : **264330604808**
Option 2 ID : **264330604807**
Option 3 ID : **264330604810**
Option 4 ID : **264330604809**
Status : **Answered**
Chosen Option : **2**

Section : **General Awareness**

Q.1 The novel 'God of Small Things' is a creation of which novelist?

- Ans**
- 1. Kamala Das
 - 2. Amrita Pritam
 - 3. Ashapurna Devi
 - 4. Arundhati Roy

Question ID : **264330160970**
Option 1 ID : **264330631212**
Option 2 ID : **264330631213**
Option 3 ID : **264330631211**
Option 4 ID : **264330631214**
Status : **Not Answered**
Chosen Option : **--**

Q.2 Which of the following terms best describes the average number of runs a batter makes per 100 deliveries in cricket?

- Ans**
- 1. Economy rate
 - 2. Batting average
 - 3. Strike rate
 - 4. Batting rate

Question ID : **264330161160**
Option 1 ID : **264330631971**
Option 2 ID : **264330631973**
Option 3 ID : **264330631972**
Option 4 ID : **264330631974**
Status : **Answered**
Chosen Option : **3**

Q.3 Yuki Bhambri and Saketh Myneni won the Bangkok Open Challenger title 2023. They are related to which sport?

- Ans
- 1. Badminton
 - 2. Squash
 - 3. Tennis
 - 4. Table Tennis

Question ID : 264330158368
Option 1 ID : 264330620832
Option 2 ID : 264330620834
Option 3 ID : 264330620831
Option 4 ID : 264330620833
Status : Not Answered
Chosen Option : --

Q.4 Deba Prasad Das, Pankaj Charan Das and Gangadhar Pradhan are associated with which of the following dance forms?

- Ans
- 1. Odissi
 - 2. Bharatanatyam
 - 3. Manipuri
 - 4. Kathak

Question ID : 264330160814
Option 1 ID : 264330630587
Option 2 ID : 264330630589
Option 3 ID : 264330630590
Option 4 ID : 264330630588
Status : Not Answered
Chosen Option : --

Q.5 Which of the following is NOT a fundamental duty listed in the Indian Constitution?

- Ans
- 1. To uphold and protect the sovereignty, unity and integrity of India
 - 2. To engage in political activities to promote democracy
 - 3. To value and preserve the rich heritage of our composite culture
 - 4. To safeguard public property and to abjure violence

Question ID : 264330162246
Option 1 ID : 264330636311
Option 2 ID : 264330636314
Option 3 ID : 264330636313
Option 4 ID : 264330636312
Status : Answered
Chosen Option : 1

Q.6 As of 2022, 12-foot statue of Adi Shankaracharya, which was unveiled by the Prime Minister of India is located in _____

- Ans
- 1. Pune
 - 2. Ahmedabad
 - 3. Varanasi
 - 4. Kedarnath

Question ID : 264330162698
Option 1 ID : 264330638113
Option 2 ID : 264330638114
Option 3 ID : 264330638112
Option 4 ID : 264330638111
Status : Answered
Chosen Option : 1

Q.7 During cell division, the formation of a new cell wall is followed by the accumulation of:

- Ans
- 1. peristome
 - 2. periplasm
 - 3. phragmoplast
 - 4. protoplast

Question ID : 264330156616
Option 1 ID : 264330613854
Option 2 ID : 264330613853
Option 3 ID : 264330613851
Option 4 ID : 264330613852
Status : Answered
Chosen Option : 4

Q.8 Bhanu Ji is associated with which of the following Gharanas of Kathak?

- Ans
- 1. Lucknow
 - 2. Raigarh
 - 3. Banaras
 - 4. Jaipur

Question ID : 264330160808
Option 1 ID : 264330630564
Option 2 ID : 264330630566
Option 3 ID : 264330630565
Option 4 ID : 264330630563
Status : Not Answered
Chosen Option : --

Q.9 Which of the following is an example of capital expenditure in the government budget?

- Ans
- 1. Interest payment on a loan
 - 2. Purchase of military equipment
 - 3. Maintenance of government buildings
 - 4. Subsidies provided to farmers

Question ID : 264330157276
Option 1 ID : 264330616469
Option 2 ID : 264330616468
Option 3 ID : 264330616470
Option 4 ID : 264330616467
Status : Answered
Chosen Option : 2

Q.10 FIH Men's Hockey World Cup 2023 was held in which Indian state/UT?

- Ans
- 1. Maharashtra
 - 2. New Delhi
 - 3. Odisha
 - 4. Gujarat

Question ID : 264330158218
Option 1 ID : 264330620232
Option 2 ID : 264330620233
Option 3 ID : 264330620231
Option 4 ID : 264330620234
Status : Answered
Chosen Option : 3

Q.11 An image of which of the following elements is shown by the map of Cyprus from which the element got its name?

- Ans
- 1. Silver
 - 2. Cobalt
 - 3. Copper
 - 4. Sulphur

Question ID : 264330161058
Option 1 ID : 264330631564
Option 2 ID : 264330631566
Option 3 ID : 264330631565
Option 4 ID : 264330631563
Status : Answered
Chosen Option : 3

Q.12 Consider the following statements about Abhinav Bharat Society.

- 1) The society was a community of socialists believed in an armed revolution.
- 2) The society was founded by Jaya Prakash Narayan.
- 3) Mitra Mela, a revolutionary secret society was renamed Abhinav Bharat in 1904.

Select the correct statement(s) using the codes given below.

- Ans
- 1. Both 1 and 2
 - 2. 1, 2 and 3
 - 3. Both 2 and 3
 - 4. Both 1 and 3

Question ID : 264330160884
Option 1 ID : 264330630867
Option 2 ID : 264330630870
Option 3 ID : 264330630869
Option 4 ID : 264330630868
Status : Answered
Chosen Option : 3

Q.13 The Pradhan Mantri Garib Kalyan Rojgar Abhiyaan (PMGKRA) was launched in the year 2020 by which Ministry of Government of India?

- Ans
- 1. Ministry of Ports, Shipping and Waterways
 - 2. Ministry of Social Justice and Empowerment
 - 3. Ministry of Micro, Small and Medium Enterprises
 - 4. Ministry of Rural Development

Question ID : 264330161577
Option 1 ID : 264330633637
Option 2 ID : 264330633636
Option 3 ID : 264330633635
Option 4 ID : 264330633638
Status : Answered
Chosen Option : 4

Q.14 Who among the following is the author of the Hindi novel 'Raag Darbari'?

- Ans 1. Shrilal Shukla
 2. Rahul Sankrityayan
 3. Premchand
 4. Kashinath Singh

Question ID : 264330161763
Option 1 ID : 264330634382
Option 2 ID : 264330634380
Option 3 ID : 264330634381
Option 4 ID : 264330634379
Status : Not Answered
Chosen Option : --

Q.15 Who is the first female classical dancer in Indian history to be nominated as a Member of Rajya Sabha, the upper house of the Parliament of India?

- Ans 1. Mukti Mohan
 2. Shobha Naidu
 3. Sanjukta Panigrahi
 4. Rukmini Devi Arundale

Question ID : 264330160982
Option 1 ID : 264330631262
Option 2 ID : 264330631259
Option 3 ID : 264330631260
Option 4 ID : 264330631261
Status : Not Answered
Chosen Option : --

Q.16 What does the term 'Overdraft' mean in banking?

- Ans 1. The process of transferring funds between bank accounts
 2. The maximum withdrawal limit from an ATM
 3. Short-term financing facility
 4. The interest charged on loans

Question ID : 264330161586
Option 1 ID : 264330633671
Option 2 ID : 264330633673
Option 3 ID : 264330633674
Option 4 ID : 264330633672
Status : Answered
Chosen Option : 3

Q.17 Which of the following is an example of Eastern Ghats peak?

- Ans 1. Doddabetta
 2. Mahendragiri
 3. Guru Shikhar
 4. Anamudi

Question ID : 264330161494
Option 1 ID : 264330633303
Option 2 ID : 264330633306
Option 3 ID : 264330633305
Option 4 ID : 264330633304
Status : Answered
Chosen Option : 4

Q.18 Indian musician, Pandit Hari Prasad Chaurasia used to play which of the following musical instruments?

- Ans 1. Veena
 2. Flute
 3. Sarangi
 4. Guitar

Question ID : 264330161766
Option 1 ID : 264330634391
Option 2 ID : 264330634394
Option 3 ID : 264330634392
Option 4 ID : 264330634393
Status : Not Answered
Chosen Option : --

Q.19 Which of the following was the first major and decisive victory for the East India Company on the soil of India?

- Ans 1. Battle of Sindhuli
 2. First Anglo-Maratha War
 3. Battle of Plassey
 4. Battle of Tiruvannamalai

Question ID : 264330161736
Option 1 ID : 264330634274
Option 2 ID : 264330634272
Option 3 ID : 264330634273
Option 4 ID : 264330634271
Status : Answered
Chosen Option : 3

Q.20 Which of the following locations receives the most rainfall in India?

- Ans 1. Prayagraj
 2. Guwahati
 3. Jaisalmer
 4. Mawsynram

Question ID : 264330161306
Option 1 ID : 264330632551
Option 2 ID : 264330632553
Option 3 ID : 264330632554
Option 4 ID : 264330632552
Status : Answered
Chosen Option : 4

Q.21 According to the Census of India 2011, what was the literacy rate recorded in Kerala?

- Ans 1. 85.8%
 2. 90.3%
 3. 87.9%
 4. 94.0%

Question ID : 264330161556
Option 1 ID : 264330633554
Option 2 ID : 264330633552
Option 3 ID : 264330633553
Option 4 ID : 264330633551
Status : Answered
Chosen Option : 2

Q.22 The Digital Lok Adalat, powered by AI (Artificial Intelligence) and Blockchain, was launched by the then National Legal Services Authority Chairman _____ during the 18th All India Legal Services Authorities' meet held in Jaipur in July 2022.

- Ans**
- 1. Justice RN Mishra
 - 2. Justice DY Chandrachud
 - 3. Justice AS Anand
 - 4. Justice Uday Umesh Lalit

Question ID : 264330161412
Option 1 ID : 264330632978
Option 2 ID : 264330632976
Option 3 ID : 264330632977
Option 4 ID : 264330632975
Status : Answered
Chosen Option : 2

Q.23 Janmashtami is a Hindu festival that celebrates the birth (janma) of the god, Krishna on the eighth (ashtami) day of the dark fortnight of the Hindu month of _____.

- Ans**
- 1. Bhadrapada
 - 2. Ashwin
 - 3. Shravan
 - 4. Ashadha

Question ID : 264330160829
Option 1 ID : 264330630647
Option 2 ID : 264330630649
Option 3 ID : 264330630648
Option 4 ID : 264330630650
Status : Answered
Chosen Option : 1

Q.24 Which of the following music directors is known as 'Mozart of Madras'?

- Ans**
- 1. AR Rahman
 - 2. Madan Mohan
 - 3. RD Burman
 - 4. Himesh Reshammiya

Question ID : 264330162285
Option 1 ID : 264330636468
Option 2 ID : 264330636470
Option 3 ID : 264330636467
Option 4 ID : 264330636469
Status : Answered
Chosen Option : 3

Q.25 What is the tenure of the Vice-President of India?

- Ans 1. Until the age of 65
 2. Until he wants to hold the office
 3. 6 years
 4. 5 years

Question ID : 264330159911
Option 1 ID : 264330626991
Option 2 ID : 264330626994
Option 3 ID : 264330626992
Option 4 ID : 264330626993
Status : Answered
Chosen Option : 4

Section : English Language and Comprehension

Q.1 Select the most appropriate option that can substitute the underlined segment in the given sentence.

If I hand her a flower and say, "Give it to mamma," she take it to her mother.

- Ans 1. was taking it
 2. takes it
 3. had took it
 4. had taken it

Question ID : 264330153488
Option 1 ID : 264330601468
Option 2 ID : 264330601470
Option 3 ID : 264330601469
Option 4 ID : 264330601467
Status : Answered
Chosen Option : 2

Q.2 Select the most appropriate ANTONYM of the given word.
Divergent

- Ans 1. Addition
 2. Similar
 3. Disrespectful
 4. Obvious

Question ID : 264330152721
Option 1 ID : 264330598485
Option 2 ID : 264330598484
Option 3 ID : 264330598483
Option 4 ID : 264330598486
Status : Answered
Chosen Option : 2

Q.3 Parts of the following sentence have been underlined and given as options. Select the option that contains an error.

To much seriousness hardens the world, pinning it down with rules.

- Ans
- 1. with rules
 - 2. hardens the
 - 3. to much
 - 4. world, pinning

Question ID : 264330153204
Option 1 ID : 264330600378
Option 2 ID : 264330600375
Option 3 ID : 264330600376
Option 4 ID : 264330600377
Status : Answered
Chosen Option : 3

Q.4 Select the most appropriate meaning of the underlined idiom.

He managed to save his father's business by the sweat of his brow.

- Ans
- 1. incidentally
 - 2. hard work
 - 3. tricks and strategies
 - 4. any way possible

Question ID : 264330153641
Option 1 ID : 264330602038
Option 2 ID : 264330602037
Option 3 ID : 264330602035
Option 4 ID : 264330602036
Status : Answered
Chosen Option : 3

Q.5 Select the option that can be used as a one-word substitute for the given phrase.

A place where water is collected and stored for future use.

- Ans
- 1. Aquarium
 - 2. Resort
 - 3. Sanatorium
 - 4. Reservoir

Question ID : 264330152670
Option 1 ID : 264330598285
Option 2 ID : 264330598286
Option 3 ID : 264330598283
Option 4 ID : 264330598284
Status : Answered
Chosen Option : 4

Q.6 Select the option that will improve the underlined part of the given sentence. In case no improvement is needed, select 'No improvement required'.

The new chairman of the company announced attracted bonus for the employees on the occasion of the new year.

- Ans 1. No improvement required
2. announced an attractive bonus for the employees
3. announcing attracted bonus for the employees
4. announced attracting bonus for the employees

Question ID : 264330153612
Option 1 ID : 264330601934
Option 2 ID : 264330601933
Option 3 ID : 264330601932
Option 4 ID : 264330601931
Status : Answered
Chosen Option : 2

Q.7 The following sentence has been divided into four parts. Identify the part that contains an error.

(A) The institute / (B) have been / (C) divided into / (D) multiple departments

- Ans 1. A
2. B
3. C
4. D

Question ID : 264330152623
Option 1 ID : 264330598096
Option 2 ID : 264330598095
Option 3 ID : 264330598098
Option 4 ID : 264330598097
Status : Answered
Chosen Option : 2

Q.8 Select the option that can be used as a one-word substitute for the underlined group of words.

They allowed us to powder by crushing the spices, pick over the raisins and lick the stirring spoons.

- Ans 1. gain
2. greet
3. guess
4. grind

Question ID : 264330153491
Option 1 ID : 264330601482
Option 2 ID : 264330601479
Option 3 ID : 264330601480
Option 4 ID : 264330601481
Status : Answered
Chosen Option : 4

Q.9 Select the most appropriate synonym of the given word.
Mild

- Ans 1. Scathing
 2. Brittle
 3. Gentle
 4. Severe

Question ID : 264330151823
Option 1 ID : 264330594921
Option 2 ID : 264330594920
Option 3 ID : 264330594919
Option 4 ID : 264330594922
Status : Answered
Chosen Option : 3

Q.10 Select the most appropriate idiom to fill in the blank.
Instead of answering the question directly, the politician kept _____.

- Ans 1. crying over spilt milk
 2. pointing at his laurels
 3. beating around the bush
 4. spilling the bean

Question ID : 264330151889
Option 1 ID : 264330595177
Option 2 ID : 264330595176
Option 3 ID : 264330595178
Option 4 ID : 264330595175
Status : Answered
Chosen Option : 3

Q.11 Select the most appropriate option that can substitute the underlined segment in the given sentence.
Rishi asked Karan will he get a new football for him?

- Ans 1. would he get a new football for him?
 2. if he would get a new football for him.
 3. if would he get a new football for him?
 4. if he will get a new football for him?

Question ID : 264330153504
Option 1 ID : 264330601529
Option 2 ID : 264330601530
Option 3 ID : 264330601527
Option 4 ID : 264330601528
Status : Answered
Chosen Option : 2

Q.12 Select the INCORRECTLY spelt word.

- Ans 1. Omitted
 2. Retrospect
 3. Conscience
 4. Admission

Question ID : 264330152690
Option 1 ID : 264330598363
Option 2 ID : 264330598364
Option 3 ID : 264330598366
Option 4 ID : 264330598365
Status : Answered
Chosen Option : 2

Q.13 Select the most appropriate ANTONYM of the given word.
Often

- Ans 1. Generally
 2. Rarely
 3. Periodically
 4. Usually

Question ID : 264330152775
Option 1 ID : 264330598691
Option 2 ID : 264330598692
Option 3 ID : 264330598694
Option 4 ID : 264330598693
Status : Answered
Chosen Option : 2

Q.14 Parts of the following sentence have been given as options. Select the option that contains an error.
The boy whose the sister is ill has left.

- Ans 1. is ill
 2. has left
 3. The boy
 4. whose the sister

Question ID : 264330152795
Option 1 ID : 264330598773
Option 2 ID : 264330598774
Option 3 ID : 264330598771
Option 4 ID : 264330598772
Status : Answered
Chosen Option : 4

Q.15 Select the most appropriate option to fill in the blank.

A strong _____ for mathematics and problem-solving can be very useful.

- Ans 1. strength
 2. aptitude
 3. functioning
 4. perception

Question ID : 264330151865
Option 1 ID : 264330595080
Option 2 ID : 264330595081
Option 3 ID : 264330595079
Option 4 ID : 264330595082
Status : Answered
Chosen Option : 2

Q.16 Select the INCORRECTLY spelt word.

- Ans 1. Recommendation
 2. Priviledge
 3. Affiliate
 4. Parachute

Question ID : 264330152689
Option 1 ID : 264330598361
Option 2 ID : 264330598359
Option 3 ID : 264330598360
Option 4 ID : 264330598362
Status : Answered
Chosen Option : 2

Q.17 Select the most appropriate idiom to fill in the blank.

My manager forced me to resign from my job as a chef since I underwent a spine surgery. I was depressed and had lost all hope. Later my father motivated me to open my own café and showed me ways to be independent. After all it is true that one should not _____.

- Ans 1. grease the palm
 2. blow one's own trumpet
 3. cry over spilt milk
 4. blow hot and cold

Question ID : 264330152879
Option 1 ID : 264330599108
Option 2 ID : 264330599110
Option 3 ID : 264330599107
Option 4 ID : 264330599109
Status : Answered
Chosen Option : 3

Q.18 Select the most appropriate meaning of the underlined idiom in the following sentence.

He was quaking in his boots when he had to give a speech on the stage.

- Ans
- 1. To tremble in excitement
 - 2. To shake in happiness
 - 3. To tremble with fear
 - 4. To shake in excitement

Question ID : 264330153075

Option 1 ID : 264330599864

Option 2 ID : 264330599866

Option 3 ID : 264330599865

Option 4 ID : 264330599863

Status : Answered

Chosen Option : 1

Q.19 Select the most appropriate option that can substitute the underlined segment in the given sentence. If there is no need to substitute it, select 'No substitution required'.
If I will get good marks, my father will buy me a laptop.

- Ans
- 1. No substitution required
 - 2. am getting
 - 3. gets
 - 4. get

Question ID : 264330152728

Option 1 ID : 264330598514

Option 2 ID : 264330598513

Option 3 ID : 264330598511

Option 4 ID : 264330598512

Status : Answered

Chosen Option : 4

Q.20 Four words of the following sentence have been underlined and given as options. Select the option that contains a spelling error.
Human activities that release longlived greenhouse gases into the atmosphere also leed to the enhancement of concentrations of shorterlived ozone and particulate matter in the atmosphere.

- Ans
- 1. concentrations
 - 2. particulate
 - 3. release
 - 4. leed

Question ID : 264330151930

Option 1 ID : 264330595337

Option 2 ID : 264330595338

Option 3 ID : 264330595335

Option 4 ID : 264330595336

Status : Answered

Chosen Option : 4

Comprehension:

In the following passage, some words have been deleted. Read the passage carefully and select the most appropriate option to fill in each blank.

Fruits and vegetables contain important vitamins, minerals and plant (1)_____. They also contain fibre. There are many (2)_____ of fruits and vegetables available and many ways to prepare, cook and serve them. A diet (3)_____ in fruit and vegetables can help protect you against cancer, diabetes and heart disease. Eat five kinds of vegetable and two kinds of fruit every day for good health. Most Indians do not eat (4)_____ fruit and vegetables. When buying and serving fruit and vegetables, aim for variety to get the most (5)_____ and appeal.

SubQuestion No : 21

Q.21 Select the most appropriate option to fill in blank number 1.

- Ans
- 1. residue
 - 2. bacteria
 - 3. chemicals
 - 4. organisms

Question ID : 264330153326

Option 1 ID : 264330600855

Option 2 ID : 264330600858

Option 3 ID : 264330600856

Option 4 ID : 264330600857

Status : Answered

Chosen Option : 3

Comprehension:

In the following passage, some words have been deleted. Read the passage carefully and select the most appropriate option to fill in each blank.

Fruits and vegetables contain important vitamins, minerals and plant (1)_____. They also contain fibre. There are many (2)_____ of fruits and vegetables available and many ways to prepare, cook and serve them. A diet (3)_____ in fruit and vegetables can help protect you against cancer, diabetes and heart disease. Eat five kinds of vegetable and two kinds of fruit every day for good health. Most Indians do not eat (4)_____ fruit and vegetables. When buying and serving fruit and vegetables, aim for variety to get the most (5)_____ and appeal.

SubQuestion No : 22

Q.22 Select the most appropriate option to fill in blank number 2.

- Ans
- 1. traits
 - 2. characters
 - 3. varieties
 - 4. uses

Question ID : 264330153327

Option 1 ID : 264330600860

Option 2 ID : 264330600861

Option 3 ID : 264330600862

Option 4 ID : 264330600859

Status : Answered

Chosen Option : 3

Comprehension:

In the following passage, some words have been deleted. Read the passage carefully and select the most appropriate option to fill in each blank.

Fruits and vegetables contain important vitamins, minerals and plant (1)_____. They also contain fibre. There are many (2)_____ of fruits and vegetables available and many ways to prepare, cook and serve them. A diet (3)_____ in fruit and vegetables can help protect you against cancer, diabetes and heart disease. Eat five kinds of vegetable and two kinds of fruit every day for good health. Most Indians do not eat (4)_____ fruit and vegetables. When buying and serving fruit and vegetables, aim for variety to get the most (5)_____ and appeal.

SubQuestion No : 23

Q.23 Select the most appropriate option to fill in blank number 3.

- Ans 1. immersed
 2. rich
 3. content
 4. varied

Question ID : 264330153328

Option 1 ID : 264330600863

Option 2 ID : 264330600865

Option 3 ID : 264330600864

Option 4 ID : 264330600866

Status : Answered

Chosen Option : 2

Comprehension:

In the following passage, some words have been deleted. Read the passage carefully and select the most appropriate option to fill in each blank.

Fruits and vegetables contain important vitamins, minerals and plant (1)_____. They also contain fibre. There are many (2)_____ of fruits and vegetables available and many ways to prepare, cook and serve them. A diet (3)_____ in fruit and vegetables can help protect you against cancer, diabetes and heart disease. Eat five kinds of vegetable and two kinds of fruit every day for good health. Most Indians do not eat (4)_____ fruit and vegetables. When buying and serving fruit and vegetables, aim for variety to get the most (5)_____ and appeal.

SubQuestion No : 24

Q.24 Select the most appropriate option to fill in blank number 4.

- Ans 1. some
 2. enough
 3. many
 4. plenty

Question ID : 264330153329

Option 1 ID : 264330600869

Option 2 ID : 264330600868

Option 3 ID : 264330600867

Option 4 ID : 264330600870

Status : Answered

Chosen Option : 2

Comprehension:

In the following passage, some words have been deleted. Read the passage carefully and select the most appropriate option to fill in each blank.

Fruits and vegetables contain important vitamins, minerals and plant (1)_____. They also contain fibre. There are many (2)_____ of fruits and vegetables available and many ways to prepare, cook and serve them. A diet (3)_____ in fruit and vegetables can help protect you against cancer, diabetes and heart disease. Eat five kinds of vegetable and two kinds of fruit every day for good health. Most Indians do not eat (4)_____ fruit and vegetables. When buying and serving fruit and vegetables, aim for variety to get the most (5)_____ and appeal.

SubQuestion No : 25

Q.25 Select the most appropriate option to fill in blank number 5.

- Ans 1. assortment
 2. fun
 3. nutrients
 4. advancement

Question ID : 264330153330

Option 1 ID : 264330600872

Option 2 ID : 264330600873

Option 3 ID : 264330600874

Option 4 ID : 264330600871

Status : Answered

Chosen Option : 3

SSC MTS 2023 Tier 1 Sept 13 Shift 3 Question Paper with Answers

Roll Number	
Candidate Name	
Exam Date	13/09/2023
Exam Time	4:00 PM - 6:00 PM
Subject	MTS Non Tech Havaladar CBIC and CBN Examination 2023

Section : Numerical and Mathematical Ability

Q.1 A microwave and a dish washing machine were sold for ₹27,000 each. If the microwave was sold at a gain of 25% and the dish washing machine at a loss of 25%. What is the overall profit% or loss% on the entire transaction?

- Ans**
- 1. 5.50% loss
 - 2. 7.75% profit
 - 3. 6.25% loss
 - 4. 8.25% profit

Question ID : 264330156285

Option 1 ID : 264330612542

Option 2 ID : 264330612540

Option 3 ID : 264330612539

Option 4 ID : 264330612541

Status : Answered

Chosen Option : 3

Q.2 A, B and C started a business. A's capital is 7 times the capital of C and B's capital is 2 times the capital of A. If the profit is ₹7,920, then find the share of C (in ₹).

- Ans**
- 1. 350
 - 2. 360
 - 3. 365
 - 4. 355

Question ID : 264330156225

Option 1 ID : 264330612299

Option 2 ID : 264330612301

Option 3 ID : 264330612302

Option 4 ID : 264330612300

Status : Answered

Chosen Option : 2

Q.3 The average expenditure of 32 persons is ₹6,000 and that of another 40 persons is ₹3,300. The average expenditure of the whole group is:

- Ans**
- 1. ₹4,800
 - 2. ₹4,500
 - 3. ₹4,650
 - 4. ₹4,162

Question ID : 264330153869

Option 1 ID : 264330602942

Option 2 ID : 264330602939

Option 3 ID : 264330602940

Option 4 ID : 264330602941

Status : Answered

Chosen Option : 2

Q.4 A person invests ₹5,000 at a simple interest rate of 5% per annum for 5 years. At the end of 5 years, she reinvests the entire amount at the same rate of interest for another 3 years. What will be the total interest earned by the person at the end of 8 years?

- Ans**
- 1. ₹2,156.50
 - 2. ₹2,256.50
 - 3. ₹2,323.50
 - 4. ₹2,187.50

Question ID : 264330156270

Option 1 ID : 264330612480

Option 2 ID : 264330612481

Option 3 ID : 264330612482

Option 4 ID : 264330612479

Status : Answered

Chosen Option : 4

Q.5 A shopkeeper bought an oven for ₹25,000 and sold it for ₹29,500. He spent ₹1,500 as overheads. What is his loss or gain percentage (rounded off to the nearest integer)?

- Ans**
- 1. Loss by 11%
 - 2. Gain by 13%
 - 3. Loss by 13%
 - 4. Gain by 11%

Question ID : 264330163011

Option 1 ID : 264330639361

Option 2 ID : 264330639360

Option 3 ID : 264330639359

Option 4 ID : 264330639362

Status : Answered

Chosen Option : 4

Q.6 A motorboat travelling at some speed can cover 28 km upstream and 40 km downstream in 11 hours. At the same speed it can travel 30 km downstream and 16 km upstream in 7 hours, then the speed of the stream is:

- Ans**
- 1. 2 km/h
 - 2. 4 km/h
 - 3. 3 km/h
 - 4. 1 km/h

Question ID : 264330154094

Option 1 ID : 264330603839

Option 2 ID : 264330603842

Option 3 ID : 264330603841

Option 4 ID : 264330603840

Status : Answered

Chosen Option : 3

Q.7 The longest diagonal of a cube is $6\sqrt{3}$ cm. Find the total surface area of the cube.

- Ans**
- 1. 648 cm²
 - 2. 216 cm²
 - 3. 36 cm²
 - 4. 324 cm²

Question ID : 264330153897

Option 1 ID : 264330603053

Option 2 ID : 264330603051

Option 3 ID : 264330603052

Option 4 ID : 264330603054

Status : Answered

Chosen Option : 2

Q.8 The following table gives the national income and the population of a country for the years 1984-85 to 1989-90.

Year	National Income (in crores)	Population (In crore)
1984-85	₹229.225	74.0
1985-86	₹261.174	75.0
1986-87	₹291.556	77.0
1987-88	₹329.200	78.5
1988-89	₹389.500	80.0
1989-90	₹434.500	81.5

What was the average national income (in crores) for the years 1987-88, 1988-89 and 1989-90?

- Ans**
- 1. ₹392.4
 - 2. ₹384.4
 - 3. ₹398.2
 - 4. ₹396.2

Question ID : 264330156281

Option 1 ID : 264330612524

Option 2 ID : 264330612523

Option 3 ID : 264330612526

Option 4 ID : 264330612525

Status : Answered

Chosen Option : 2

Q.9 Find a fourth proportional to the numbers 3, 9, 8.

- Ans
- 1. 10
 - 2. 12
 - 3. 20
 - 4. 24

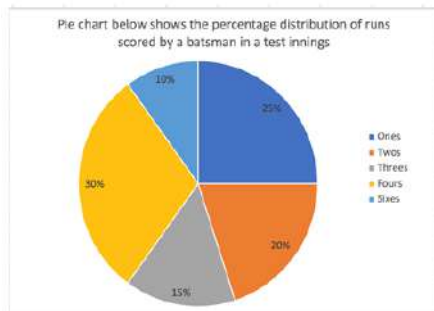
Question ID : 264330153878
 Option 1 ID : 264330602976
 Option 2 ID : 264330602978
 Option 3 ID : 264330602975
 Option 4 ID : 264330602977
 Status : Answered
 Chosen Option : 4

Q.10 What is the average of natural numbers from 1 to 73?

- Ans
- 1. 28
 - 2. 37
 - 3. 30
 - 4. 34

Question ID : 264330155726
 Option 1 ID : 264330610307
 Option 2 ID : 264330610310
 Option 3 ID : 264330610308
 Option 4 ID : 264330610309
 Status : Answered
 Chosen Option : 2

Q.11 The following Pie chart shows the percentage distribution of runs scored by a batsman in a test innings.



If the batsman has scored a total of 360 runs, how many 4's and 6's did he hit?

- Ans
- 1. 30 and 3
 - 2. 31 and 2
 - 3. 27 and 6
 - 4. 25 and 8

Question ID : 264330153784
 Option 1 ID : 264330602600
 Option 2 ID : 264330602602
 Option 3 ID : 264330602601
 Option 4 ID : 264330602599
 Status : Answered
 Chosen Option : 3

Q.12 The Value of $\{[2^4(20 \times 5 + 10) \div 11] - (2^3 \times 15 \div 20) - (9 \times 16)\}$ is:

- Ans
- 1. 8
 - 2. 16
 - 3. 10
 - 4. 12

Question ID : 264330156459
Option 1 ID : 264330613224
Option 2 ID : 264330613226
Option 3 ID : 264330613225
Option 4 ID : 264330613223
Status : Answered
Chosen Option : 3

Q.13 A can complete a task in 10 days. He worked for 4 days and then stopped. B completed the remaining work in 9 days.
In how many days can A and B together complete the task?

- Ans
- 1. 6 days
 - 2. 5 days
 - 3. 4 days
 - 4. 7 days

Question ID : 264330156276
Option 1 ID : 264330612505
Option 2 ID : 264330612504
Option 3 ID : 264330612503
Option 4 ID : 264330612506
Status : Answered
Chosen Option : 1

Q.14 Find the compound interest (in ₹) on ₹500 in 2 years at 20% per annum if the interest being compounded half-yearly.

- Ans
- 1. 232.05
 - 2. 132.05
 - 3. 225.08
 - 4. 264.05

Question ID : 264330155748
Option 1 ID : 264330610397
Option 2 ID : 264330610395
Option 3 ID : 264330610396
Option 4 ID : 264330610398
Status : Answered
Chosen Option : 1

Q.15 A solid metallic cuboid of length 11 cm, breadth 8 cm and height 6 cm is melted and reshaped to form a cone of height 14 cm. What is the radius of the cone thus formed?

- Ans**
- 1. 6 cm
 - 2. 9 cm
 - 3. 7 cm
 - 4. 8 cm

Question ID : **264330154140**
 Option 1 ID : **264330604023**
 Option 2 ID : **264330604026**
 Option 3 ID : **264330604025**
 Option 4 ID : **264330604024**
 Status : **Answered**
 Chosen Option : **1**

Q.16 P can complete $\frac{1}{5}$ of a work in 12 days and Q can complete $\frac{1}{6}$ of a work in 8 days. In how many days can both P and Q together complete the work?

- Ans**
- 1. $26\frac{2}{3}$
 - 2. $24\frac{2}{3}$
 - 3. $25\frac{4}{5}$
 - 4. $22\frac{4}{5}$

Question ID : **264330155975**
 Option 1 ID : **264330611300**
 Option 2 ID : **264330611299**
 Option 3 ID : **264330611302**
 Option 4 ID : **264330611301**
 Status : **Answered**
 Chosen Option : **1**

Q.17 A bike crosses a bridge with a speed of 75 km/h. What will be the length (in km) of the bridge, if the bike takes 20 minutes to cross the bridge?

- Ans**
- 1. 30
 - 2. 25
 - 3. 45
 - 4. 20

Question ID : **264330155751**
 Option 1 ID : **264330610409**
 Option 2 ID : **264330610408**
 Option 3 ID : **264330610410**
 Option 4 ID : **264330610407**
 Status : **Answered**
 Chosen Option : **2**

Q.18 What is the greatest three-digit number which when divided by 4, 8 and 9, leaves no remainder?

- Ans**
- 1. 924
 - 2. 963
 - 3. 932
 - 4. 936

Question ID : **264330155685**
Option 1 ID : **264330610143**
Option 2 ID : **264330610146**
Option 3 ID : **264330610144**
Option 4 ID : **264330610145**
Status : **Answered**
Chosen Option : **4**

Q.19 The price of a bottle is first increased by 15% and later the price was decreased by 24% due to a reduction in sales. Find the net percentage change in the final price of the bottle.

- Ans**
- 1. Decrease of 13.9%
 - 2. Decrease of 12.6%
 - 3. Increase of 13.9%
 - 4. Increase of 12.6%

Question ID : **264330155734**
Option 1 ID : **264330610339**
Option 2 ID : **264330610341**
Option 3 ID : **264330610340**
Option 4 ID : **264330610342**
Status : **Answered**
Chosen Option : **2**

Q.20 A car covers 60 km at a speed of 84 km/h. If the average speed for the whole journey is 72 km/h, then the speed of the car for the next 60 km of the journey is:

- Ans**
- 1. 63 km/h
 - 2. 68 km/h
 - 3. 78 km/h
 - 4. 75 km/h

Question ID : **264330157894**
Option 1 ID : **264330618937**
Option 2 ID : **264330618936**
Option 3 ID : **264330618935**
Option 4 ID : **264330618938**
Status : **Answered**
Chosen Option : **1**

Q.1 What should come in place of '?' in the given series?

14 43 130 391 1174 ?

Ans 1. 3519

2. 2476

3. 3416

4. 3523

Question ID : 264330151479

Option 1 ID : 264330593545

Option 2 ID : 264330593544

Option 3 ID : 264330593543

Option 4 ID : 264330593546

Status : Answered

Chosen Option : 4

Q.2 What should come in place of ? in the given series?

22 24 28 30 34 ?

Ans 1. 38

2. 40

3. 42

4. 36

Question ID : 264330151720

Option 1 ID : 264330594510

Option 2 ID : 264330594507

Option 3 ID : 264330594508

Option 4 ID : 264330594509

Status : Answered

Chosen Option : 4

Q.3 Which figure should replace the question mark (?) if the following figure series were to be continued?

T	□	O	Y	♥	↑	T	N	
O	N	L	Y	♥	□	A	↑	T
♥	↑	T	N	A	Y	♥	2	?

Ans

✗ 1.

△	Y
T	K
A	N

✓ 2.

A	Y
♥	K
△	N

✗ 3.

♥	2
△	A
T	Y

✗ 4.

A	Y
♥	△
T	N

Question ID : 264330154748
 Option 1 ID : 264330606457
 Option 2 ID : 264330606455
 Option 3 ID : 264330606456
 Option 4 ID : 264330606458
 Status : Answered
 Chosen Option : 4

Q.4 Select the word-pair that best represents a similar relationship to the one expressed in the pair of words given below.

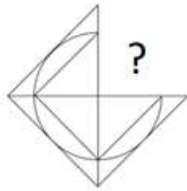
(The words must be considered as meaningful English words and must not be related to each other based on the number of letters/number of consonants/vowels in the word)

Horse : Mare

- Ans
- ✓ 1. Fox : Vixen
 - ✗ 2. Duck : Geese
 - ✗ 3. Donkey : Pony
 - ✗ 4. Dog : Puppy

Question ID : 264330154632
 Option 1 ID : 264330605991
 Option 2 ID : 264330605992
 Option 3 ID : 264330605994
 Option 4 ID : 264330605993
 Status : Answered
 Chosen Option : 1

Q.5 Identify the figure that completes the pattern (rotation is NOT allowed).



Ans

✗ 1.



✗ 2.



✓ 3.



✗ 4.



Question ID : 264330154515

Option 1 ID : 264330605523

Option 2 ID : 264330605525

Option 3 ID : 264330605524

Option 4 ID : 264330605526

Status : Answered

Chosen Option : 3

Q.6 What should come in place of ? in the given series based on the English alphabetical order?

PVC, SUF, VIL, YSL, ?

Ans

✗ 1. CQR

✗ 2. DRP

✗ 3. CSP

✓ 4. BRO

Question ID : 264330155791

Option 1 ID : 264330610570

Option 2 ID : 264330610568

Option 3 ID : 264330610567

Option 4 ID : 264330610569

Status : Answered

Chosen Option : 4

Q.7 Select the combination of letters that when sequentially placed in the blanks of the given series, will complete the series.

DE _ D _ D _ E _ _ ED

- Ans**
- 1. EDDED
 - 2. DDEDE
 - 3. DEDDD
 - 4. DEDEE

Question ID : 264330151652

Option 1 ID : 264330594237

Option 2 ID : 264330594235

Option 3 ID : 264330594238

Option 4 ID : 264330594236

Status : Answered

Chosen Option : 3

Q.8 What will come in place of '?' in the following equation, if '+' and '×' are interchanged and '×' and '-' are interchanged?

$$12 + 6 \times 5 - 7 + 2 = ?$$

- Ans**
- 1. -13
 - 2. -14
 - 3. -31
 - 4. -46

Question ID : 264330154657

Option 1 ID : 264330606093

Option 2 ID : 264330606091

Option 3 ID : 264330606094

Option 4 ID : 264330606092

Status : Answered

Chosen Option : 3

Q.9 4 is related to 14 following a certain logic. Following the same logic, 7 is related to 26. To which of the following is 9 related to, following the same logic?

- Ans**
- 1. 37
 - 2. 36
 - 3. 34
 - 4. 35

Question ID : 264330151604

Option 1 ID : 264330594046

Option 2 ID : 264330594045

Option 3 ID : 264330594043

Option 4 ID : 264330594044

Status : Answered

Chosen Option : 3

Q.10 If 15 July 2010 is a Thursday, then what will be the day of the week on 5 June 2022?

- Ans**
- 1. Wednesday
 - 2. Tuesday
 - 3. Monday
 - 4. Sunday

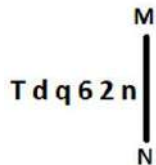
Question ID : 264330154354
 Option 1 ID : 264330604882
 Option 2 ID : 264330604881
 Option 3 ID : 264330604880
 Option 4 ID : 264330604879
 Status : Answered
 Chosen Option : 2

Q.11 2 is related to 7 following a certain logic. Following the same logic, 4 is related to 63. To which of the following is 9 related to, following the same logic?

- Ans**
- 1. 730
 - 2. 728
 - 3. 731
 - 4. 729

Question ID : 264330151586
 Option 1 ID : 264330593973
 Option 2 ID : 264330593971
 Option 3 ID : 264330593974
 Option 4 ID : 264330593972
 Status : Answered
 Chosen Option : 2

Q.12 Select the correct mirror image of the given figure when the mirror is placed at MN as shown below.



- Ans**
- 1. n 5 ə d q T
 - 2. n 5 ə p b T
 - 3. n 2 ə p b L
 - 4. u 5 6 p b T

Question ID : 264330151504
 Option 1 ID : 264330593643
 Option 2 ID : 264330593646
 Option 3 ID : 264330593645
 Option 4 ID : 264330593644
 Status : Answered
 Chosen Option : 2

Q.13 What should come in place of ? in the given series based on the English alphabetical order?

WAP, VEO, UIN, TMM, ?

- Ans**
- 1. RPM
 - 2. QPN
 - 3. SQL
 - 4. QSN

Question ID : 264330155793

Option 1 ID : 264330610575

Option 2 ID : 264330610578

Option 3 ID : 264330610576

Option 4 ID : 264330610577

Status : Answered

Chosen Option : 3

Q.14 In a certain code language, 'TUNE' is coded as '4368' and 'UNIT' is coded as '8423'. What is the code for 'I' in the given code language?

- Ans**
- 1. 4
 - 2. 3
 - 3. 2
 - 4. 8

Question ID : 264330151701

Option 1 ID : 264330594434

Option 2 ID : 264330594431

Option 3 ID : 264330594432

Option 4 ID : 264330594433

Status : Answered

Chosen Option : 3

Q.15 Read the given statements and conclusions carefully. You have to take the given statements to be true even if they seem to be at variance from commonly known facts. You have to decide which conclusion/s logically follow/s from the given statements.

Statements: Some laptops are pencils. Some pencils are rulers. All rulers are white.

Conclusion I: Some pencils are laptops.

Conclusion II: All rulers are pencils.

- Ans**
- 1. Both conclusions (I) and (II) are follow.
 - 2. Only conclusion (I) is follow.
 - 3. Neither conclusion (I) nor (II) is follow.
 - 4. Only conclusion (II) is follow.

Question ID : 264330155892

Option 1 ID : 264330610974

Option 2 ID : 264330610971

Option 3 ID : 264330610973

Option 4 ID : 264330610972

Status : Answered

Chosen Option : 2

Q.16 If D means '-'; C means '×'; F means '+'; B means '+', then what will come in place of the question mark (?) in the following equation?

$$28 B 72 F 6 D 8 C 4 - ?$$

- Ans**
- 1. 14
 - 2. 26
 - 3. 18
 - 4. 8

Question ID : 264330154692

Option 1 ID : 264330606232

Option 2 ID : 264330606234

Option 3 ID : 264330606233

Option 4 ID : 264330606231

Status : Answered

Chosen Option : 4

Q.17 Seven people, W, D, J, S, H, G and Y are sitting in a straight line, facing south. G sits second to the left of S. G is the immediate neighbour of D and H. Y sits third to the right of D. Only two people sit to the right of W.

Who sits at the extreme right end of the line?

- Ans**
- 1. W
 - 2. Y
 - 3. J
 - 4. G

Question ID : 264330161692

Option 1 ID : 264330634098

Option 2 ID : 264330634095

Option 3 ID : 264330634096

Option 4 ID : 264330634097

Status : Answered

Chosen Option : 3

Q.18 Read the given statements and conclusions carefully. You have to take the given statements to be true even if they seem to be at variance from commonly known facts. You have to decide which conclusion/s logically follow/s from the given statements.

Statements: All crows are bananas. Some bananas are pink. All pink are white.

Conclusion I: Some crows are bananas.

Conclusion II: All bananas are pink.

- Ans**
- 1. Only conclusion (II) is follow.
 - 2. Neither conclusion (I) nor (II) is follow.
 - 3. Only conclusion (I) is follow.
 - 4. Both conclusions (I) and (II) are follow.

Question ID : 264330155916

Option 1 ID : 264330611068

Option 2 ID : 264330611069

Option 3 ID : 264330611067

Option 4 ID : 264330611070

Status : Answered

Chosen Option : 3

Q.19 What should come in place of '?' in the given series?

11 91 811 ? 65611 590491 5314411

- Ans
- 1. 7129
 - 2. 7291
 - 3. 7921
 - 4. 7912

Question ID : 264330151442
Option 1 ID : 264330593397
Option 2 ID : 264330593396
Option 3 ID : 264330593395
Option 4 ID : 264330593398
Status : Answered
Chosen Option : 2

Q.20 In a certain code language, 'people talk about' is written as 'ki li ni' and 'let them talk' is written as 'si ki hi'. How is 'talk' written in the given language?

- Ans
- 1. li
 - 2. ki
 - 3. hi
 - 4. ni

Question ID : 264330155635
Option 1 ID : 264330609944
Option 2 ID : 264330609943
Option 3 ID : 264330609946
Option 4 ID : 264330609945
Status : Answered
Chosen Option : 2

Section : General Awareness

Q.1 In which year was the Pradhan Mantri Rojgar Protsahan Yojana (PMRPY) launched?

- Ans
- 1. 2018
 - 2. 2015
 - 3. 2016
 - 4. 2022

Question ID : 264330161505
Option 1 ID : 264330633347
Option 2 ID : 264330633349
Option 3 ID : 264330633350
Option 4 ID : 264330633348
Status : Answered
Chosen Option : 4

Q.2 The film based on which of the following novels by Amrita Pritam won the National Film Award?

- Ans
- 1. Nagmani
 - 2. Raseedi Ticket
 - 3. Village No.36
 - 4. Pinjar

Question ID : 264330161764
Option 1 ID : 264330634384
Option 2 ID : 264330634386
Option 3 ID : 264330634385
Option 4 ID : 264330634383
Status : Answered
Chosen Option : 4

Q.3 Which Indian Musician was awarded with the Bharat Ratna in 2001?

- Ans
- 1. Shivkumar Sharma
 - 2. Bhimsen Joshi
 - 3. Bismillah Khan
 - 4. Hariprasad Chaurasia

Question ID : 264330155460
Option 1 ID : 264330609243
Option 2 ID : 264330609245
Option 3 ID : 264330609244
Option 4 ID : 264330609246
Status : Answered
Chosen Option : 3

Q.4 Who was the Prime Minister of India when the Fundamental Duties were first incorporated in the Constitution of India?

- Ans
- 1. Jawaharlal Nehru
 - 2. Indira Gandhi
 - 3. Atal Bihari Vajpayee
 - 4. Rajiv Gandhi

Question ID : 264330159900
Option 1 ID : 264330626948
Option 2 ID : 264330626949
Option 3 ID : 264330626950
Option 4 ID : 264330626947
Status : Answered
Chosen Option : 2

Q.5 Who said the following?

“Money is what money does.”

- Ans**
- 1. Prof. Seligman
 - 2. Prof. Cole
 - 3. Prof. Walker
 - 4. Prof. Robertson

Question ID : **264330166032**
Option 1 ID : **264330651206**
Option 2 ID : **264330651204**
Option 3 ID : **264330651203**
Option 4 ID : **264330651205**
Status : **Answered**
Chosen Option : **2**

Q.6 Which of the following ports is located in Odisha?

- Ans**
- 1. Haldia port
 - 2. Kandla port
 - 3. Paradip Port
 - 4. Tuticorin Port

Question ID : **264330161492**
Option 1 ID : **264330633296**
Option 2 ID : **264330633297**
Option 3 ID : **264330633298**
Option 4 ID : **264330633295**
Status : **Answered**
Chosen Option : **3**

Q.7 Rohini Bhate, Pandit Munnalal Shukla, Kumudini Lakhia and Uma Sharma are famous exponents of which of the following classical dance forms?

- Ans**
- 1. Bharatanatyam
 - 2. Kathakali
 - 3. Kathak
 - 4. Kuchipudi

Question ID : **264330160788**
Option 1 ID : **264330630483**
Option 2 ID : **264330630485**
Option 3 ID : **264330630486**
Option 4 ID : **264330630484**
Status : **Answered**
Chosen Option : **3**

Q.8 The forces exerted on a body during a short period are known as:

- Ans 1. Impulse
 2. Pressure
 3. Surface tension
 4. Tensile stress

Question ID : 264330157783
Option 1 ID : 264330618491
Option 2 ID : 264330618492
Option 3 ID : 264330618493
Option 4 ID : 264330618494
Status : Answered
Chosen Option : 1

Q.9 India played the final of ODI Cricket World Cup 2011 against which country?

- Ans 1. Australia
 2. Sri Lanka
 3. England
 4. Pakistan

Question ID : 264330158229
Option 1 ID : 264330620277
Option 2 ID : 264330620278
Option 3 ID : 264330620276
Option 4 ID : 264330620275
Status : Answered
Chosen Option : 2

Q.10 Mohiniyattam is a classical dance style belongs to _____.

- Ans 1. Kerala
 2. Odisha
 3. Manipur
 4. Tamil Nadu

Question ID : 264330159050
Option 1 ID : 264330623561
Option 2 ID : 264330623559
Option 3 ID : 264330623562
Option 4 ID : 264330623560
Status : Answered
Chosen Option : 1

Q.11 Which of the following is NOT a feature of the Indian political party system?

- Ans 1. Lack of effective opposition
 2. Single party system
 3. Multi-party system
 4. Factions and defections

Question ID : 264330159913
Option 1 ID : 264330627001
Option 2 ID : 264330627002
Option 3 ID : 264330626999
Option 4 ID : 264330627000
Status : Answered
Chosen Option : 2

Q.12 Which of the following was the first Satyagraha Movement led by Mahatma Gandhi in British India?

- Ans 1. Champaran Satyagraha
 2. Kheda Satyagraha
 3. Rowlatt Satyagraha
 4. Bardoli Satyagraha

Question ID : 264330161750
Option 1 ID : 264330634330
Option 2 ID : 264330634328
Option 3 ID : 264330634327
Option 4 ID : 264330634329
Status : Answered
Chosen Option : 1

Q.13 Dr. Teejan Bai, who was awarded by Padma Vibhushan (2019) is a renowned Indian folk singer and performer from the state of _____.

- Ans 1. Himachal Pradesh
 2. Chhattisgarh
 3. Assam
 4. Rajasthan

Question ID : 264330155525
Option 1 ID : 264330609503
Option 2 ID : 264330609506
Option 3 ID : 264330609504
Option 4 ID : 264330609505
Status : Answered
Chosen Option : 4

Q.14 The fundamental vocabulary of _____ dance constitutes mock combat techniques, stylised gaits of birds and animals and movements modelled on the chores of village housewives and mostly performed by male dancers in Eastern India.

- Ans 1. Manipuri
 2. Kathakali
 3. Chhau
 4. Sattariya

Question ID : 264330161890
Option 1 ID : 264330634890
Option 2 ID : 264330634889
Option 3 ID : 264330634888
Option 4 ID : 264330634887
Status : Answered
Chosen Option : 3

Q.15 The Red Fort is located in:

- Ans 1. Lucknow
 2. Delhi
 3. Indore
 4. Ahmedabad

Question ID : 264330160769
Option 1 ID : 264330630408
Option 2 ID : 264330630410
Option 3 ID : 264330630407
Option 4 ID : 264330630409
Status : Answered
Chosen Option : 2

Q.16 The Goa government launched a new scheme in November 2022 for which of the following?

- Ans 1. Ithihas Darshan
 2. Goa Darshan
 3. Bharat Darshan
 4. Dev Darshan

Question ID : 264330158326
Option 1 ID : 264330620666
Option 2 ID : 264330620665
Option 3 ID : 264330620663
Option 4 ID : 264330620664
Status : Answered
Chosen Option : 2

Q.17 Ruturaj Gaikwad became the first batsman in List-A cricket to hit how many sixes in an over?

- Ans 1. 4
 2. 5
 3. 6
 4. 7

Question ID : 264330158366
Option 1 ID : 264330620823
Option 2 ID : 264330620824
Option 3 ID : 264330620825
Option 4 ID : 264330620826
Status : Answered
Chosen Option : 4

Q.18 The author of 'Malgudi Days' is:

- Ans
- 1. Chetan Bhagat
 - 2. Rabindranath Tagore
 - 3. Vikram Seth
 - 4. RK Narayan

Question ID : 264330155497
Option 1 ID : 264330609391
Option 2 ID : 264330609394
Option 3 ID : 264330609393
Option 4 ID : 264330609392
Status : Answered
Chosen Option : 4

Q.19 Camels are found in which type of forests in India from the following?

- Ans
- 1. Montane forests
 - 2. The thorn forest and scrubs
 - 3. Mangrove forests
 - 4. Tropical evergreen forests

Question ID : 264330161498
Option 1 ID : 264330633322
Option 2 ID : 264330633319
Option 3 ID : 264330633320
Option 4 ID : 264330633321
Status : Answered
Chosen Option : 2

Q.20 Under whom among the following British Governor-Generals was the new policy of 'paramountcy' initiated in British India by the East India Company?

- Ans
- 1. Lord Hastings
 - 2. Lord Amherst
 - 3. Lord Wellesley
 - 4. Lord Cornwallis

Question ID : 264330161738
Option 1 ID : 264330634279
Option 2 ID : 264330634281
Option 3 ID : 264330634280
Option 4 ID : 264330634282
Status : Answered
Chosen Option : 3

Q.21 Paryushana Parva is a festival of which of the following communities?

- Ans
- 1. Jain
 - 2. Christian
 - 3. Parsi
 - 4. Hindu

Question ID : 264330159079
Option 1 ID : 264330623678
Option 2 ID : 264330623677
Option 3 ID : 264330623676
Option 4 ID : 264330623675
Status : Answered
Chosen Option : 1

Q.22 Who coined the word 'cell' in the 1600s, from the Latin word 'cellula', meaning 'small room'?

- Ans 1. Louis Pasteur
 2. Robert Hooke
 3. Theodor Schwann
 4. Lynn Margulis

Question ID : 264330161081
Option 1 ID : 264330631657
Option 2 ID : 264330631655
Option 3 ID : 264330631656
Option 4 ID : 264330631658
Status : Answered
Chosen Option : 2

Q.23 Which of the following is a feature of Micro Finance Institutions?

- Ans 1. Financial service to government employees
 2. Finance service to Union ministers
 3. Financial service to corporate
 4. Financial service to disadvantaged people

Question ID : 264330161455
Option 1 ID : 264330633149
Option 2 ID : 264330633150
Option 3 ID : 264330633148
Option 4 ID : 264330633147
Status : Answered
Chosen Option : 4

Q.24 Which of the following States became the overall champions in both the men's and women's categories in the 2023 Janjatiya Khel Mahotsav?

- Ans 1. Chhattisgarh
 2. Karnataka
 3. Jharkhand
 4. Odisha

Question ID : 264330161131
Option 1 ID : 264330631857
Option 2 ID : 264330631855
Option 3 ID : 264330631856
Option 4 ID : 264330631858
Status : Answered
Chosen Option : 1

Q.25 The Mohorovicic (Moho) discontinuity separates?

- Ans
- 1. Earth's lithosphere and asthenosphere
 - 2. Earth's atmosphere and hydrosphere
 - 3. Earth's crust and the inner core
 - 4. Earth's crust and the mantle

Question ID : 264330157831
Option 1 ID : 264330618683
Option 2 ID : 264330618684
Option 3 ID : 264330618686
Option 4 ID : 264330618685
Status : Answered
Chosen Option : 4

Section : English Language and Comprehension

Q.1 The following sentence has been split into four segments. Identify the segment that contains a grammatical error and select the option which rectifies that error.

The space agency wanted / to test with a chimp / before orbiting a astronaut / in a Mercury capsule.

- Ans
- 1. The space agency want
 - 2. in an Mercury capsule.
 - 3. before orbiting an astronaut
 - 4. to test with an chimp

Question ID : 264330141339
Option 1 ID : 264330553691
Option 2 ID : 264330553693
Option 3 ID : 264330553692
Option 4 ID : 264330553694
Status : Answered
Chosen Option : 3

Q.2 Select the most appropriate option that can substitute the underlined segment in the given sentence.

They said that he is not going to call them.

- Ans
- 1. he shall not call them
 - 2. he has not gone to call them
 - 3. they are not going to call them
 - 4. he was not going to call them

Question ID : 264330152711
Option 1 ID : 264330598445
Option 2 ID : 264330598444
Option 3 ID : 264330598446
Option 4 ID : 264330598443
Status : Answered
Chosen Option : 1

Q.3 Parts of the following sentence have been underlined and given as options. Select the option that contains a misspelt word.

For every endeavour-whether in the area of career, academics, music, sports or even in spirituality, it is a long ardous journey.

Ans 1. ardous

2. endeavour

3. academics

4. career

Question ID : 264330151836

Option 1 ID : 264330594974

Option 2 ID : 264330594971

Option 3 ID : 264330594973

Option 4 ID : 264330594972

Status : Answered

Chosen Option : 1

Q.4 Select the most appropriate meaning of the underlined idiom.

The entrepreneur decided to throw caution to the wind.

Ans 1. Take a risk

2. Take the best option

3. Think innovatively

4. In extreme windy conditions

Question ID : 264330153146

Option 1 ID : 264330600145

Option 2 ID : 264330600143

Option 3 ID : 264330600144

Option 4 ID : 264330600146

Status : Answered

Chosen Option : 1

Q.5 Select the most appropriate synonym of the given word.

Tedious

Ans 1. Carefree

2. Hostile

3. Dynamic

4. Dreary

Question ID : 264330152681

Option 1 ID : 264330598328

Option 2 ID : 264330598330

Option 3 ID : 264330598327

Option 4 ID : 264330598329

Status : Answered

Chosen Option : 4

Q.6 Select the option that can be used as a one-word substitute for the given group of words.

Not fit for eating

- Ans
- 1. Inept
 - 2. Ineligible
 - 3. Ineluctable
 - 4. Inedible

Question ID : 264330151907

Option 1 ID : 264330595246

Option 2 ID : 264330595243

Option 3 ID : 264330595244

Option 4 ID : 264330595245

Status : Answered

Chosen Option : 4

Q.7 The following sentence has been split into four segments. Identify the segment that contains an error.

If he had paid / attention to the announcement, / he had not / missed the train.

- Ans
- 1. If he had paid
 - 2. he had not
 - 3. attention to the announcement
 - 4. missed the train

Question ID : 264330143054

Option 1 ID : 264330560491

Option 2 ID : 264330560493

Option 3 ID : 264330560492

Option 4 ID : 264330560494

Status : Answered

Chosen Option : 2

Q.8 Select the most appropriate meaning of the given idiom.

Child's play

- Ans
- 1. In someone's role
 - 2. Something very easy
 - 3. Weakness
 - 4. Just behaviour

Question ID : 264330151827

Option 1 ID : 264330594938

Option 2 ID : 264330594937

Option 3 ID : 264330594936

Option 4 ID : 264330594935

Status : Answered

Chosen Option : 2

Q.9 Select the option that rectifies the spelling of the underlined word in the given sentence.

The tour company has included all the activities that you have requested in your itenary.

- Ans
- 1. itinerarey
 - 2. itenerarey
 - 3. itinerary
 - 4. itenerary

Question ID : 264330153228
Option 1 ID : 264330600472
Option 2 ID : 264330600471
Option 3 ID : 264330600474
Option 4 ID : 264330600473
Status : Answered
Chosen Option : 3

Q.10 Select the most appropriate meaning of the given idiom.

Spill the beans

- Ans
- 1. To believe something as it seems
 - 2. To tell a secret
 - 3. To do things in a fair way
 - 4. To cry over what is done

Question ID : 264330153011
Option 1 ID : 264330599618
Option 2 ID : 264330599617
Option 3 ID : 264330599616
Option 4 ID : 264330599615
Status : Answered
Chosen Option : 2

Q.11 Select the most appropriate meaning of the underlined idiom.

The mother requested the nurse to keep an eye on the baby while she went for tea.

- Ans
- 1. Keep informed
 - 2. Mistreat
 - 3. Watch and take care
 - 4. Watch for the arrival or appearance

Question ID : 264330151832
Option 1 ID : 264330594955
Option 2 ID : 264330594957
Option 3 ID : 264330594958
Option 4 ID : 264330594956
Status : Answered
Chosen Option : 3

Q.12 Select the most appropriate option that can substitute the underlined segment in the given sentence.

If you need any help tomorrow, let him knows.

- Ans
- 1. let me know
 - 2. let us known
 - 3. let him known
 - 4. let them knew

Question ID : 264330153596
Option 1 ID : 264330601873
Option 2 ID : 264330601874
Option 3 ID : 264330601872
Option 4 ID : 264330601871
Status : Answered
Chosen Option : 1

Q.13 Select the most appropriate option that can substitute the underlined segment in the given sentence.

Helena loves to dig and played in the dirt like any other child.

- Ans
- 1. playing on dirt
 - 2. playing with in dirt
 - 3. plays of dirt
 - 4. play in the dirt

Question ID : 264330153485
Option 1 ID : 264330601455
Option 2 ID : 264330601458
Option 3 ID : 264330601457
Option 4 ID : 264330601456
Status : Answered
Chosen Option : 4

Q.14 Select the most appropriate option that can substitute the underlined segment in the given sentence.

The development of skills can contribute to structural transformation and economic growth in enhance employability and labour productivity and helping countries to become more competitive.

- Ans
- 1. about enhancing employability
 - 2. by enhanced employability
 - 3. by enhancing employability
 - 4. for enhanced employability

Question ID : 264330151900
Option 1 ID : 264330595215
Option 2 ID : 264330595216
Option 3 ID : 264330595218
Option 4 ID : 264330595217
Status : Answered
Chosen Option : 3

Q.15 Select the most appropriate option that can substitute the underlined segment in the given sentence.

Everyone likes in watch a magic show.

- Ans
- 1. likes to watching
 - 2. like in watching
 - 3. likes to watch
 - 4. liked in watch

Question ID : 264330153472
Option 1 ID : 264330601404
Option 2 ID : 264330601405
Option 3 ID : 264330601403
Option 4 ID : 264330601406
Status : Answered
Chosen Option : 3

Q.16 The given sentence contains an error. Select the option that correctly rectifies the error.

He is the better-looking hero in the entire film industry.

- Ans
- 1. He is the best-looking hero in the entire film industry.
 - 2. He is the good-looking hero than the entire film industry.
 - 3. He is the best-looking hero more than the entire film industry.
 - 4. He is the good-looking hero in the entire film industry.

Question ID : 264330152608
Option 1 ID : 264330598036
Option 2 ID : 264330598037
Option 3 ID : 264330598038
Option 4 ID : 264330598035
Status : Answered
Chosen Option : 1

Q.17 Select the most appropriate option to fill in the blank.
He is first _____ to his job and then to his family.

- Ans
- 1. enabled
 - 2. committed
 - 3. confirmed
 - 4. convinced

Question ID : 264330153550
Option 1 ID : 264330601702
Option 2 ID : 264330601701
Option 3 ID : 264330601700
Option 4 ID : 264330601699
Status : Answered
Chosen Option : 2

Q.18 Select the most appropriate synonym of the given word.
Pretend

- Ans** 1. Feign
 2. Benign
 3. Align
 4. Reign

Question ID : 264330151826
Option 1 ID : 264330594933
Option 2 ID : 264330594934
Option 3 ID : 264330594931
Option 4 ID : 264330594932
Status : Answered
Chosen Option : 1

Q.19 Select the most appropriate ANTONYM of the given word.
Align

- Ans** 1. Position
 2. Disrupt
 3. Centre
 4. Coincide

Question ID : 264330152590
Option 1 ID : 264330597964
Option 2 ID : 264330597963
Option 3 ID : 264330597965
Option 4 ID : 264330597966
Status : Answered
Chosen Option : 2

Q.20 Select the option that rectifies the spelling of the underlined word in the given sentence.

One of her colleagues had agreed to act as the arbitratore in finalising the contract.

- Ans** 1. arbitetrator
 2. arboritor
 3. arbitraitor
 4. arbitrator

Question ID : 264330153226
Option 1 ID : 264330600464
Option 2 ID : 264330600465
Option 3 ID : 264330600466
Option 4 ID : 264330600463
Status : Answered
Chosen Option : 4

Comprehension:

In the following passage, some words have been deleted. Read the passage carefully and select the most appropriate option to fill in each blank.

There will only be two types of human beings in the future: the minority having enormous brains and (1)_____ bodies, and the majority with tiny brains and muscular bodies. The size of the average brain will (2)_____ diminish; not because of our innate laziness, but because of our over-concern about our physical appearance. In the old days, most people dreamt of having shelter and a stable food supply. As we no longer struggle for the basic (3)_____, our dreams focus instead on the search for physical beauty, how to obtain and maintain the 'ideal body shape' and healthy life the media promotes. Physical beauty will become the main goal of the majority. They'll do exercises every day, taking (4)_____ to maintain their shape while not noticing that their brains are shrinking. Actually, there is no doubt that they'll work (5)_____ hard to make their brains smaller.

SubQuestion No : 21

Q.21 Select the most appropriate option to fill in blank number 1.

- Ans 1. cute
 2. minor
 3. tiny
 4. minute

Question ID : 264330153054

Option 1 ID : 264330599780

Option 2 ID : 264330599781

Option 3 ID : 264330599779

Option 4 ID : 264330599782

Status : Answered

Chosen Option : 3

Comprehension:

In the following passage, some words have been deleted. Read the passage carefully and select the most appropriate option to fill in each blank.

There will only be two types of human beings in the future: the minority having enormous brains and (1)_____ bodies, and the majority with tiny brains and muscular bodies. The size of the average brain will (2)_____ diminish; not because of our innate laziness, but because of our over-concern about our physical appearance. In the old days, most people dreamt of having shelter and a stable food supply. As we no longer struggle for the basic (3)_____, our dreams focus instead on the search for physical beauty, how to obtain and maintain the 'ideal body shape' and healthy life the media promotes. Physical beauty will become the main goal of the majority. They'll do exercises every day, taking (4)_____ to maintain their shape while not noticing that their brains are shrinking. Actually, there is no doubt that they'll work (5)_____ hard to make their brains smaller.

SubQuestion No : 22

Q.22 Select the most appropriate option to fill in blank number 2.

- Ans 1. properly
 2. gradually
 3. appropriately
 4. slightly

Question ID : 264330153055

Option 1 ID : 264330599783

Option 2 ID : 264330599784

Option 3 ID : 264330599786

Option 4 ID : 264330599785

Status : Answered

Chosen Option : 2

Comprehension:

In the following passage, some words have been deleted. Read the passage carefully and select the most appropriate option to fill in each blank.

There will only be two types of human beings in the future: the minority having enormous brains and (1)_____ bodies, and the majority with tiny brains and muscular bodies. The size of the average brain will (2)_____ diminish; not because of our innate laziness, but because of our over-concern about our physical appearance. In the old days, most people dreamt of having shelter and a stable food supply. As we no longer struggle for the basic (3)_____, our dreams focus instead on the search for physical beauty, how to obtain and maintain the 'ideal body shape' and healthy life the media promotes. Physical beauty will become the main goal of the majority. They'll do exercises every day, taking (4)_____ to maintain their shape while not noticing that their brains are shrinking. Actually, there is no doubt that they'll work (5)_____ hard to make their brains smaller.

SubQuestion No : 23

Q.23 Select the most appropriate option to fill in blank number 3.

Ans ✓ 1. necessities

✗ 2. identities

✗ 3. facilities

✗ 4. amenities

Question ID : 264330153056

Option 1 ID : 264330599789

Option 2 ID : 264330599790

Option 3 ID : 264330599788

Option 4 ID : 264330599787

Status : Answered

Chosen Option : 1

Comprehension:

In the following passage, some words have been deleted. Read the passage carefully and select the most appropriate option to fill in each blank.

There will only be two types of human beings in the future: the minority having enormous brains and (1)_____ bodies, and the majority with tiny brains and muscular bodies. The size of the average brain will (2)_____ diminish; not because of our innate laziness, but because of our over-concern about our physical appearance. In the old days, most people dreamt of having shelter and a stable food supply. As we no longer struggle for the basic (3)_____, our dreams focus instead on the search for physical beauty, how to obtain and maintain the 'ideal body shape' and healthy life the media promotes. Physical beauty will become the main goal of the majority. They'll do exercises every day, taking (4)_____ to maintain their shape while not noticing that their brains are shrinking. Actually, there is no doubt that they'll work (5)_____ hard to make their brains smaller.

SubQuestion No : 24

Q.24 Select the most appropriate option to fill in blank number 4.

Ans ✗ 1. nutrition

✓ 2. nutrients

✗ 3. preservatives

✗ 4. additives

Question ID : 264330153057

Option 1 ID : 264330599792

Option 2 ID : 264330599791

Option 3 ID : 264330599794

Option 4 ID : 264330599793

Status : Answered

Chosen Option : 4

Comprehension:

In the following passage, some words have been deleted. Read the passage carefully and select the most appropriate option to fill in each blank.

There will only be two types of human beings in the future: the minority having enormous brains and (1)_____ bodies, and the majority with tiny brains and muscular bodies. The size of the average brain will (2)_____ diminish; not because of our innate laziness, but because of our over-concern about our physical appearance. In the old days, most people dreamt of having shelter and a stable food supply. As we no longer struggle for the basic (3)_____, our dreams focus instead on the search for physical beauty, how to obtain and maintain the 'ideal body shape' and healthy life the media promotes. Physical beauty will become the main goal of the majority. They'll do exercises every day, taking (4)_____ to maintain their shape while not noticing that their brains are shrinking. Actually, there is no doubt that they'll work (5)_____ hard to make their brains smaller.

SubQuestion No : 25

Q.25 Select the most appropriate option to fill in blank number 5.

- Ans 1. so
 2. rarely
 3. impishly
 4. extremely

Question ID : 264330153058

Option 1 ID : 264330599795

Option 2 ID : 264330599796

Option 3 ID : 264330599798

Option 4 ID : 264330599797

Status : Answered

Chosen Option : 3