

SSC MTS 2023 Tier 1 Sept 14 Shift 1 Question Paper with Answers

Roll Number	
Candidate Name	
Exam Date	14/09/2023
Exam Time	9:00 AM - 11:00 AM
Subject	MTS Non Tech Havaladar CBIC and CBN Examination 2023

Section : Numerical and Mathematical Ability

Q.1 A and B can do a piece of work in 30 days and 40 days, respectively. They began the work together but after a certain time, A leaves off and B completed the remaining work in 25 days. After how many days did A leave?

- Ans**
- ✓ 1. $6\frac{3}{7}$
- ✗ 2. $5\frac{3}{7}$
- ✗ 3. $5\frac{2}{7}$
- ✗ 4. $6\frac{1}{7}$

Question ID : 264330155757

Option 1 ID : 264330610434

Option 2 ID : 264330610433

Option 3 ID : 264330610432

Option 4 ID : 264330610431

Status : Answered

Chosen Option : 1

Q.2 6 skilled workers can complete a work in 4 days. After three days 3 more skilled workers joined them. How many days will they now take to complete the remaining work?

- Ans**
- ✓ 1. $\frac{2}{3}$
- ✗ 2. $\frac{1}{2}$
- ✗ 3. $\frac{1}{3}$
- ✗ 4. $\frac{3}{4}$

Question ID : 264330155760

Option 1 ID : 264330610446

Option 2 ID : 264330610444

Option 3 ID : 264330610443

Option 4 ID : 264330610445

Status : Answered

Chosen Option : 1

Q.3 In a class of boys and girls, the number of girls is twice the number of boys. If 20 more boys join the class, the ratio of girls and boys is 1 : 1. How many total students were there in the class initially?

- Ans 1. 60
 2. 75
 3. 45
 4. 90

Question ID : 264330153807

Option 1 ID : 264330602692

Option 2 ID : 264330602693

Option 3 ID : 264330602691

Option 4 ID : 264330602694

Status : Answered

Chosen Option : 1

Q.4 Atul sells goods to a customer at a profit of P%. If the cost price of the goods for the customer is ₹1,50,000 and Atul makes a profit of ₹30,000, then what is the value of P?

- Ans 1. 22
 2. 25
 3. 20
 4. 28

Question ID : 264330159631

Option 1 ID : 264330625884

Option 2 ID : 264330625885

Option 3 ID : 264330625883

Option 4 ID : 264330625886

Status : Answered

Chosen Option : 1

Q.5 Mixture 1 with a volume of 8 litres has 80% milk and Mixture 2 with a volume of 6 litres has 60% milk. Both the mixtures are mixed. Find the percentage of milk in the final mixture.

- Ans 1. $\frac{600}{7}$
 2. $\frac{500}{9}$
 3. $\frac{500}{7}$
 4. $\frac{800}{9}$

Question ID : 264330153801

Option 1 ID : 264330602668

Option 2 ID : 264330602667

Option 3 ID : 264330602669

Option 4 ID : 264330602670

Status : Answered

Chosen Option : 1

Q.6 Study the given table and answer the question that follows.

The table shows the number of students appeared and passed in different fields in a University.

Years	Medical		Engineering		Commerce		Management	
	Appeared	Passed	Appeared	Passed	Appeared	Passed	Appeared	Passed
2010	300	250	460	256	380	352	365	322
2011	345	320	440	365	401	354	314	314
2012	280	240	384	327	460	400	378	344
2013	310	230	390	290	430	392	387	353
2014	450	380	415	358	388	352	270	227
2015	380	286	486	456	366	315	290	257

What percentage of total students appearing in 2011, appeared in the medical field?

- Ans**
- ✓ 1. 23%
 - ✗ 2. 21%
 - ✗ 3. 20%
 - ✗ 4. 25%

Question ID : 264330156241

Option 1 ID : 264330612365

Option 2 ID : 264330612364

Option 3 ID : 264330612363

Option 4 ID : 264330612366

Status : Answered

Chosen Option : 4

Q.7 A thief is spotted by a policeman from a distance of 250 m. When the policeman starts chase, the thief also starts running. Assuming that the speed of the thief is 10 km/h and that of the policeman is 12.5 km/h. How far will have the thief run before he is caught?

- Ans**
- ✗ 1. 3 km
 - ✓ 2. 1 km
 - ✗ 3. 4 km
 - ✗ 4. 2 km

Question ID : 264330156347

Option 1 ID : 264330612789

Option 2 ID : 264330612787

Option 3 ID : 264330612790

Option 4 ID : 264330612788

Status : Answered

Chosen Option : 1

Q.8 Simplify: $6\frac{4}{5} \div \left[4\frac{1}{4} \div \left\{ 5\frac{1}{3} \times \frac{3}{8} + \left(3\frac{1}{2} + \frac{2}{3} \right) \times \frac{4}{5} \right\} \right]$

- Ans
- 1. $8\frac{8}{15}$
 - 2. $7\frac{8}{25}$
 - 3. $8\frac{8}{25}$
 - 4. $7\frac{8}{15}$

Question ID : 264330153752

Option 1 ID : 264330602473

Option 2 ID : 264330602472

Option 3 ID : 264330602471

Option 4 ID : 264330602474

Status : Answered

Chosen Option : 1

Q.9 Amit drove for 6 hours at a speed of 60 miles per hour and for 6 hours at 40 miles per hour. What was his average speed (in miles per hour) for the whole journey?

- Ans
- 1. 48
 - 2. 44
 - 3. 46
 - 4. 50

Question ID : 264330156215

Option 1 ID : 264330612261

Option 2 ID : 264330612259

Option 3 ID : 264330612260

Option 4 ID : 264330612262

Status : Answered

Chosen Option : 1

Q.10 A jewel was sold passing through 3 hands and on the whole, its price is raised by 80%. The first seller earns 20% profit and the second seller earns 25% profit, respectively. Find the percentage of profit earned by the third seller.

- Ans
- 1. 20%
 - 2. 10%
 - 3. 15%
 - 4. 5%

Question ID : 264330153839

Option 1 ID : 264330602821

Option 2 ID : 264330602822

Option 3 ID : 264330602819

Option 4 ID : 264330602820

Status : Answered

Chosen Option : 1

Q.11 A certain sum is invested at a simple interest rate of 12% per annum for a certain period of time. If the sum becomes four times the principal at the end of the period, what is the duration of the investment?

- Ans**
- 1. 22 years
 - 2. 24 years
 - 3. 25 years
 - 4. 20 years

Question ID : **264330156271**
Option 1 ID : **264330612484**
Option 2 ID : **264330612485**
Option 3 ID : **264330612486**
Option 4 ID : **264330612483**
Status : **Answered**
Chosen Option : 1

Q.12 Mr. Kalra borrowed ₹1,35,000 to meet the expenses of his son's education. If the rate of interest is 12% per annum compounded annually, then how much amount will he have to make after 2 years and 3 months to settle the account?

- Ans**
- 1. ₹1,74,424.32
 - 2. ₹1,50,640.40
 - 3. ₹1,49,920.32
 - 4. ₹1,74,760

Question ID : **264330154131**
Option 1 ID : **264330603988**
Option 2 ID : **264330603990**
Option 3 ID : **264330603989**
Option 4 ID : **264330603987**
Status : **Answered**
Chosen Option : 1

Q.13 The ratio of two numbers is 7 : 11 and their LCM is 462. What is the difference between these two numbers?

- Ans**
- 1. 24
 - 2. 26
 - 3. 30
 - 4. 28

Question ID : **264330155688**
Option 1 ID : **264330610155**
Option 2 ID : **264330610156**
Option 3 ID : **264330610158**
Option 4 ID : **264330610157**
Status : **Answered**
Chosen Option : 1

Q.14 The diameter of the base of a cylindrical vessel is 30 cm and its height is 56 cm. Find its curved surface area (in cm^2).

- Ans**
- 1. 6080
 - 2. 6280
 - 3. 5280
 - 4. 5080

Question ID : 264330153863
Option 1 ID : 264330602916
Option 2 ID : 264330602918
Option 3 ID : 264330602917
Option 4 ID : 264330602915
Status : Answered
Chosen Option : 4

Q.15 The length, breadth and height of a cuboid are in the ratio of 6 : 4 : 3. If the total surface area of the cuboid is 972 cm^2 , what is the length (in cm) of the diagonal of the cuboid?

- Ans**
- 1. $5\sqrt{65}$
 - 2. $3\sqrt{61}$
 - 3. $3\sqrt{65}$
 - 4. $5\sqrt{61}$

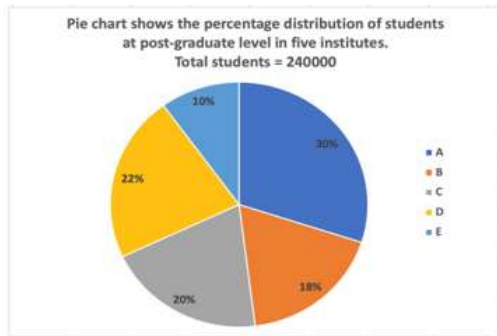
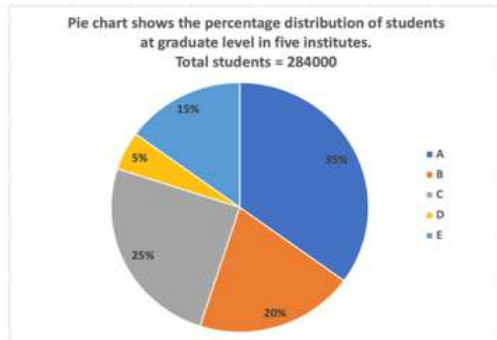
Question ID : 264330153792
Option 1 ID : 264330602631
Option 2 ID : 264330602633
Option 3 ID : 264330602632
Option 4 ID : 264330602634
Status : Answered
Chosen Option : 4

Q.16 Three numbers are in the ratio 1 : 2 : 3. By adding 5 to each of the numbers then the ratio changes to 2 : 3 : 4. The smallest number is:

- Ans**
- 1. 5
 - 2. 15
 - 3. 12
 - 4. 20

Question ID : 264330154049
Option 1 ID : 264330603662
Option 2 ID : 264330603660
Option 3 ID : 264330603661
Option 4 ID : 264330603659
Status : Answered
Chosen Option : 4

- Q.17 The following pie-charts show the distribution of students of graduate and post-graduate levels in five different institutes in a city.



What is the total number of students from institutes A, C and E at the graduate level and from institutes B and D at the post-graduate level?

- Ans
- 1. 390000
 - 2. 300900
 - 3. 300090
 - 4. 309000

Question ID : 264330153786

Option 1 ID : 264330602607

Option 2 ID : 264330602609

Option 3 ID : 264330602608

Option 4 ID : 264330602610

Status : Answered

Chosen Option : 1

- Q.18 The distance between two towns is covered in 9 hours at a speed of 60 kmph. By how much should the speed (in km/h) be increased so that 1 hour of the travelling time is saved?

- Ans
- 1. 7.5
 - 2. 10
 - 3. 15
 - 4. 12.5

Question ID : 264330156489

Option 1 ID : 264330613343

Option 2 ID : 264330613345

Option 3 ID : 264330613344

Option 4 ID : 264330613346

Status : Answered

Chosen Option : 4

Q.19 A man decided to cover 7.5 km in 72 minutes. He decided to cover two thirds of the distance at 5 km/h and the remaining at some different speed. Find the speed after two third distance has been covered.

- Ans**
- 1. 14.3 km/h
 - 2. 15.5 km/h
 - 3. 12.5 km/h
 - 4. 10 km/h

Question ID : 264330156361
 Option 1 ID : 264330612845
 Option 2 ID : 264330612846
 Option 3 ID : 264330612844
 Option 4 ID : 264330612843
 Status : Answered
 Chosen Option : 1

Q.20 Rickey spends 35% of his salary on groceries, 15% on loans, 14% on electricity bills and 6% on miscellaneous. If his savings at the end of a month are ₹2,400, then his salary per month (in ₹) is:

- Ans**
- 1. 8,000
 - 2. 5,828
 - 3. 4,000
 - 4. 6,000

Question ID : 264330156431
 Option 1 ID : 264330613116
 Option 2 ID : 264330613117
 Option 3 ID : 264330613118
 Option 4 ID : 264330613115
 Status : Answered
 Chosen Option : 2

Section : Reasoning Ability and Problem Solving

Q.1 Read the given statements and conclusions carefully. You have to take the given statements to be true even if they seem to be at variance from commonly known facts. You have to decide which conclusion/s logically follow/s from the given statements.

Statements: All trucks are bikes. All bikes are carts. Some carts are pens.

Conclusion I: Some trucks are carts.

Conclusion II: No bikes are pens.

- Ans**
- 1. Only conclusion (II) is follow.
 - 2. Both conclusions (I) and (II) are follow.
 - 3. Neither conclusion (I) nor (II) is follow.
 - 4. Only conclusion (I) is follow.

Question ID : 264330155922
 Option 1 ID : 264330611092
 Option 2 ID : 264330611094
 Option 3 ID : 264330611093
 Option 4 ID : 264330611091
 Status : Answered
 Chosen Option : 1

Q.2 What will come in the place of '?' in the following equation, if '+' and '-' are interchanged and '×' and '÷' are interchanged?

$$357 \times 7 + 19 \div 2 - 38 = ?$$

- Ans**
- ✓ 1. 51
 - ✗ 2. 71
 - ✗ 3. 61
 - ✗ 4. 41

Question ID : 264330155679

Option 1 ID : 264330610119

Option 2 ID : 264330610121

Option 3 ID : 264330610120

Option 4 ID : 264330610122

Status : Answered

Chosen Option : 1

Q.3 RN 12 is related to PL 16 in a certain way. In the same way, EJ 17 is related to CH 21. To which of the following is FL 15 related to following the same logic?

- Ans**
- ✓ 1. DJ 19
 - ✗ 2. HN 18
 - ✗ 3. CI 20
 - ✗ 4. DK 19

Question ID : 264330151670

Option 1 ID : 264330594308

Option 2 ID : 264330594309

Option 3 ID : 264330594310

Option 4 ID : 264330594307

Status : Answered

Chosen Option : 1

Q.4 Which figure should replace the question mark (?) if the following figure series were to be continued?

X	9	B	☆	T	L	9	X	
	☆		L		X		B	?
B	L	T	X	T	9	9	B	☆

Ans

✗ 1.

L		B
	T	
☆	X	9

✗ 2.

X		B
	9	
L	T	☆

✓ 3.

☆		B
	T	
L	9	X

✗ 4.

L		T
	☆	
X	B	9

Question ID : 264330154744

Option 1 ID : 264330606442

Option 2 ID : 264330606439

Option 3 ID : 264330606440

Option 4 ID : 264330606441

Status : Answered

Chosen Option : 4

Q.5 Select the combination of letters that when sequentially placed in the blanks of the given series will make it logically complete.

PYJ_ S_LM _YNM YY_M B_RM

Ans ✗ 1. PMGHY

✗ 2. HAPPY

✗ 3. MHAPV

✓ 4. MYVPY

Question ID : 264330156317

Option 1 ID : 264330612670

Option 2 ID : 264330612667

Option 3 ID : 264330612669

Option 4 ID : 264330612668

Status : Answered

Chosen Option : 4

Q.6 What should come in place of '?' in the given series?

3 21 111 561 2811 ?

- Ans
- 1. 12952
 - 2. 13468
 - 3. 14061
 - 4. 12786

Question ID : 264330151471
 Option 1 ID : 264330593512
 Option 2 ID : 264330593513
 Option 3 ID : 264330593514
 Option 4 ID : 264330593511
 Status : Answered
 Chosen Option : 1

Q.7 Select the combination of letters that when sequentially placed in the blanks of the given series, will complete the series.

_ F F E F _ _ F F _ F _

- Ans
- 1. EEEFE
 - 2. EFFE
 - 3. EFEEF
 - 4. EFFEE

Question ID : 264330151654
 Option 1 ID : 264330594244
 Option 2 ID : 264330594246
 Option 3 ID : 264330594243
 Option 4 ID : 264330594245
 Status : Answered
 Chosen Option : 3

Q.8 Read the given statements and conclusions carefully. You have to take the given statements to be true even if they seem to be at variance from commonly known facts. You have to decide which conclusion/s logically follow/s from the given statements.

Statements: Some chargers are metal. All metal are hard. Some hard are stools.

Conclusion I: All chargers are metal.

Conclusion II: Some stools are hard.

- Ans
- 1. Both conclusions (I) and (II) are follow.
 - 2. Neither conclusion (I) nor (II) is follow.
 - 3. Only conclusion (I) is follow.
 - 4. Only conclusion (II) is follow.

Question ID : 264330155902
 Option 1 ID : 264330611014
 Option 2 ID : 264330611013
 Option 3 ID : 264330611011
 Option 4 ID : 264330611012
 Status : Answered
 Chosen Option : 4

Q.9 Kiran, Pihu, Siya, Leena, Reena and Jiya are sitting around a circular table facing the centre. Kiran sits 3rd to the right of Pihu. Siya sits 2nd to the right of Kiran. Leena sits 3rd to the left of Siya. Reena is an immediate neighbour of Leena. Who sits to the immediate left of Jiya?

- Ans**
- 1. Leena
 - 2. Siya
 - 3. Pihu
 - 4. Kiran

Question ID : **264330155652**
Option 1 ID : **264330610014**
Option 2 ID : **264330610012**
Option 3 ID : **264330610013**
Option 4 ID : **264330610011**
Status : **Answered**
Chosen Option : **4**

Q.10 If 'I' stands for '+', 'J' stands for '×', 'K' stands for '÷' and 'L' stands for '-', what will come in place of the question mark (?) in the following equation?
(95 K 19) J 7 L 15 I (10 J 4) = ?

- Ans**
- 1. 50
 - 2. 40
 - 3. 70
 - 4. 60

Question ID : **264330151795**
Option 1 ID : **264330594809**
Option 2 ID : **264330594808**
Option 3 ID : **264330594810**
Option 4 ID : **264330594807**
Status : **Answered**
Chosen Option : **4**

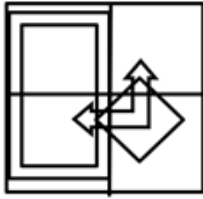
Q.11 Select the option figure in which the given figure (X) is embedded as its part (rotation is NOT allowed).



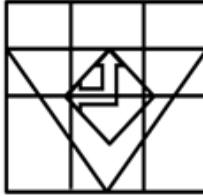
(X)

Ans

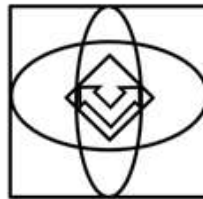
1.



2.



3.



4.



Question ID : 264330151732

Option 1 ID : 264330594556

Option 2 ID : 264330594557

Option 3 ID : 264330594558

Option 4 ID : 264330594555

Status : Answered

Chosen Option : 2

Q.12 428 is related to 317 following a certain logic. Following the same logic, 285 is related to 174. To which of the following is 597 related to, following the same logic?

Ans 1. 386

2. 368

3. 468

4. 486

Question ID : 264330151597

Option 1 ID : 264330594015

Option 2 ID : 264330594016

Option 3 ID : 264330594017

Option 4 ID : 264330594018

Status : Answered

Chosen Option : 4

Q.13 Select the set in which the numbers are related in the same way as are the numbers of the following sets.
(NOTE: Operations should be performed on the whole numbers, without breaking down the numbers into its constituent digits. E.g. 13 – Operations on 13 such as adding / subtracting /multiplying etc. to 13 can be performed. Breaking down 13 into 1 and 3 and then performing mathematical operations on 1 and 3 is not allowed)
(14, 42, 7)
(12, 34, 5)

- Ans** 1. 43, 144, 29
 2. 17, 102, 5
 3. 25, 131, 2
 4. 36, 702, 2

Question ID : **264330151612**
Option 1 ID : **264330594078**
Option 2 ID : **264330594077**
Option 3 ID : **264330594075**
Option 4 ID : **264330594076**
Status : **Answered**
Chosen Option : 2

Q.14 If 5th May 2010 is Wednesday, then what will be the day of the week on 5th June 2022?

- Ans** 1. Tuesday
 2. Monday
 3. Wednesday
 4. Sunday

Question ID : **264330154338**
Option 1 ID : **264330604817**
Option 2 ID : **264330604816**
Option 3 ID : **264330604818**
Option 4 ID : **264330604815**
Status : **Answered**
Chosen Option : 2

Q.15 What should come in place of the question mark (?) in the given series based on the English alphabetical order?

YFD, VJA, SNX, PRU, ?

- Ans** 1. MXS
 2. MVR
 3. NWS
 4. NWR

Question ID : **264330156301**
Option 1 ID : **264330612606**
Option 2 ID : **264330612605**
Option 3 ID : **264330612604**
Option 4 ID : **264330612603**
Status : **Answered**
Chosen Option : 2

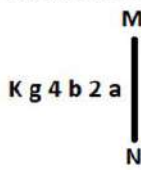
Q.16 What should come in place of ? in the given series?

26 37 59 92 136 ?

- Ans
- 1. 192
 - 2. 191
 - 3. 190
 - 4. 193

Question ID : 264330151555
 Option 1 ID : 264330593849
 Option 2 ID : 264330593848
 Option 3 ID : 264330593847
 Option 4 ID : 264330593850
 Status : Answered
 Chosen Option : 2

Q.17 Select the correct mirror image of the given figure when the mirror is placed at MN as shown below.



- Ans
- 1. K g 4 b 2 a
 - 2. K g 4 b 2 a
 - 3. K g 4 b 2 a
 - 4. K g 4 b 2 a

Question ID : 264330151518
 Option 1 ID : 264330593699
 Option 2 ID : 264330593702
 Option 3 ID : 264330593701
 Option 4 ID : 264330593700
 Status : Answered
 Chosen Option : 4

Q.18 What should come in place of '?' in the given series?

14 85 511 3067 18403 ?

- Ans
- 1. 110279
 - 2. 110581
 - 3. 110119
 - 4. 110419

Question ID : 264330151486
 Option 1 ID : 264330593572
 Option 2 ID : 264330593574
 Option 3 ID : 264330593571
 Option 4 ID : 264330593573
 Status : Answered
 Chosen Option : 4

Q.19 In a certain code language, 'NAIL' is coded as '2637' and 'LANE' is coded as '3278'. What is the code for 'E' in the given code language?

- Ans**
- 1. 8
 - 2. 7
 - 3. 2
 - 4. 3

Question ID : 264330151699
Option 1 ID : 264330594424
Option 2 ID : 264330594423
Option 3 ID : 264330594426
Option 4 ID : 264330594425
Status : Answered
Chosen Option : 1

Q.20 In a certain code language, 'MENTOR' is coded as 'EMOUPS' and 'OCTAGON' is coded as 'COUBHPO'. What is the code for 'PENCIL' in the given code language?

- Ans**
- 1. EPLICN
 - 2. LINCENP
 - 3. PLICNE
 - 4. EPODJM

Question ID : 264330155828
Option 1 ID : 264330610717
Option 2 ID : 264330610715
Option 3 ID : 264330610718
Option 4 ID : 264330610716
Status : Answered
Chosen Option : 4

Section : General Awareness

Q.1 Identify the vector quantity among these listed physical quantities?

- Ans**
- 1. Energy
 - 2. Mass
 - 3. Density
 - 4. Gravitational Intensity

Question ID : 264330157782
Option 1 ID : 264330618490
Option 2 ID : 264330618488
Option 3 ID : 264330618487
Option 4 ID : 264330618489
Status : Answered
Chosen Option : 4

Q.2 'The Palace of Illusions', a rendition of the Hindu epic 'Mahabharata', was written by which of the following novelists?

- Ans 1. Chitra Banerjee Divakaruni
 2. Pratibha Ray
 3. Devi Yesodharan
 4. Indu Sundareshan

Question ID : 264330161761
Option 1 ID : 264330634374
Option 2 ID : 264330634371
Option 3 ID : 264330634373
Option 4 ID : 264330634372
Status : Answered
Chosen Option : 1

Q.3 G Krishnakumar was appointed chairman of which of the following in 2023?

- Ans 1. Oil and Natural Gas Corporation Limited
 2. Indian Oil Corporation Limited
 3. Bharat Petroleum Corporation Limited
 4. Hindustan Petroleum Corporation Limited

Question ID : 264330158349
Option 1 ID : 264330620755
Option 2 ID : 264330620758
Option 3 ID : 264330620756
Option 4 ID : 264330620757
Status : Answered
Chosen Option : 1

Q.4 _____ was the first Indian woman to write an autobiography and also the first to do so in Bengali in her book titled 'Amar Jiban', which was published in 1876.

- Ans 1. Rassundari Devi
 2. Manikuntala Sen
 3. Sarala Devi Chaudhurani
 4. Santisudha Ghosh

Question ID : 264330161927
Option 1 ID : 264330635037
Option 2 ID : 264330635038
Option 3 ID : 264330635035
Option 4 ID : 264330635036
Status : Answered
Chosen Option : 3

Q.5 Where is the Vivekanand Rock Memorial situated?

- Ans 1. Port Blair
 2. Vishakhapatnam
 3. Kanyakumari
 4. Chennai

Question ID : 264330160776
Option 1 ID : 264330630437
Option 2 ID : 264330630438
Option 3 ID : 264330630436
Option 4 ID : 264330630435
Status : Answered
Chosen Option : 3

Q.6 Under which Act was the rule of British Crown established over India?

- Ans** 1. Government of India Act 1833
 2. Charter Act of 1813
 3. Regulating Act of 1773
 4. Government of India Act 1858

Question ID : 264330162319
Option 1 ID : 264330636605
Option 2 ID : 264330636603
Option 3 ID : 264330636604
Option 4 ID : 264330636606
Status : Answered
Chosen Option : 2

Q.7 The Kolar region of Karnataka is famous for which mineral from the following?

- Ans** 1. Coal
 2. Gold
 3. Petroleum
 4. Copper

Question ID : 264330161523
Option 1 ID : 264330633420
Option 2 ID : 264330633421
Option 3 ID : 264330633422
Option 4 ID : 264330633419
Status : Marked For Review
Chosen Option : 2

Q.8 Match the following performances of Indian naatya, which were presented by the means of variegated components:

- 1) Angika (a) costumes and make-up
2) Vachika (b) depiction of mental or psychological states
3) Aharya (c) spoken words
4) Sattvika (d) gestures and other bodily movements

- Ans** 1. 1-c, 2-b, 3-d, 4-a
 2. 1-a, 2-b, 3-d, 4-c
 3. 1-d, 2-c, 3-a, 4-b
 4. 1-c, 2-a, 3-b, 4-d

Question ID : 264330159048
Option 1 ID : 264330623551
Option 2 ID : 264330623553
Option 3 ID : 264330623554
Option 4 ID : 264330623552
Status : Answered
Chosen Option : 3

Q.9 In Fencing, a contest between the two fencers is known as:

- Ans 1. bout
 2. remise
 3. parry
 4. riposte

Question ID : 264330161162
Option 1 ID : 264330631982
Option 2 ID : 264330631981
Option 3 ID : 264330631979
Option 4 ID : 264330631980
Status : Answered
Chosen Option : 1

Q.10 In which year has the Government of India instituted Arjuna Award to recognise outstanding achievement in national sports events?

- Ans 1. 1961
 2. 1963
 3. 1964
 4. 1962

Question ID : 264330158236
Option 1 ID : 264330620304
Option 2 ID : 264330620305
Option 3 ID : 264330620306
Option 4 ID : 264330620303
Status : Not Answered
Chosen Option : --

Q.11 'Atla Taddi', a festival celebrated by married and unmarried women alike to seek the blessings of Devi Gauri for a long and happy married life and a suitable groom, respectively, is celebrated in _____.

- Ans 1. Andhra Pradesh
 2. Kerala
 3. Chhattisgarh
 4. Odisha

Question ID : 264330160817
Option 1 ID : 264330630599
Option 2 ID : 264330630600
Option 3 ID : 264330630601
Option 4 ID : 264330630602
Status : Not Answered
Chosen Option : --

Q.12 PT Usha was elected as the president of which association in December 2022?

- Ans 1. Indian Olympic Association
 2. Haryana Olympic Association
 3. National Rifle Association of India
 4. Badminton Association of India

Question ID : 264330158370
Option 1 ID : 264330620842
Option 2 ID : 264330620841
Option 3 ID : 264330620840
Option 4 ID : 264330620839
Status : Answered
Chosen Option : 1

Q.13 नीति आयोग (NITI Aayog) की पहली बहुआयामी गरीबी सूचकांक (MPI) 2021 रिपोर्ट के अनुसार, भारत में कौन-सा राज्य पहले स्थान पर है?

- Ans
- 1. झारखंड
 - 2. छत्तीसगढ़
 - 3. बिहार
 - 4. उत्तर प्रदेश

Question ID : 264330166019
Option 1 ID : 264330651152
Option 2 ID : 264330651154
Option 3 ID : 264330651151
Option 4 ID : 264330651153
Status : Answered
Chosen Option : 1

Q.14 What is the full form of UPSC?

- Ans
- 1. United Public Security Commission
 - 2. United Power & Security Commission
 - 3. Union Private Service Committee
 - 4. Union Public Service Commission

Question ID : 264330159909
Option 1 ID : 264330626983
Option 2 ID : 264330626986
Option 3 ID : 264330626984
Option 4 ID : 264330626985
Status : Answered
Chosen Option : 4

Q.15 To which of the state does Sattriya classical dance belong?

- Ans
- 1. Maharashtra
 - 2. Madhya Pradesh
 - 3. Karnataka
 - 4. Assam

Question ID : 264330159051
Option 1 ID : 264330623565
Option 2 ID : 264330623564
Option 3 ID : 264330623563
Option 4 ID : 264330623566
Status : Answered
Chosen Option : 1

Q.16 Who among the following was a renowned dancer and the first person from Odisha to receive 'Padma Vibhushan' in 2000?

- Ans**
- 1. Prabhat Swain
 - 2. Gangadhar Pradhan
 - 3. Mayadhar Raut
 - 4. Kelucharan Mohapatra

Question ID : **264330155478**
Option 1 ID : **264330609318**
Option 2 ID : **264330609317**
Option 3 ID : **264330609315**
Option 4 ID : **264330609316**
Status : **Not Answered**
Chosen Option : --

Q.17 Which musical instrument does N Rajam play?

- Ans**
- 1. Sitar
 - 2. Violin
 - 3. Santoor
 - 4. Guitar

Question ID : **264330155465**
Option 1 ID : **264330609263**
Option 2 ID : **264330609264**
Option 3 ID : **264330609265**
Option 4 ID : **264330609266**
Status : **Marked For Review**
Chosen Option : 4

Q.18 Which of the following is NOT a function of money?

- Ans**
- 1. Barter system
 - 2. Store of value
 - 3. Unit of account
 - 4. Medium of exchange

Question ID : **264330157298**
Option 1 ID : **264330616558**
Option 2 ID : **264330616556**
Option 3 ID : **264330616557**
Option 4 ID : **264330616555**
Status : **Answered**
Chosen Option : 1

Q.19 According to the Census of India 2011, what was the population density recorded in Bihar?

- Ans**
- 1. 1106 persons/km²
 - 2. 980 persons/km²
 - 3. 1050 persons/km²
 - 4. 1320 persons/km²

Question ID : 264330161551
Option 1 ID : 264330633532
Option 2 ID : 264330633534
Option 3 ID : 264330633533
Option 4 ID : 264330633531
Status : Not Answered
Chosen Option : --

Q.20 Carbohydrates are utilised by the human body in the form of:

- Ans**
- 1. glucose
 - 2. nucleotides
 - 3. fibre
 - 4. amino acids

Question ID : 264330157808
Option 1 ID : 264330618592
Option 2 ID : 264330618594
Option 3 ID : 264330618591
Option 4 ID : 264330618593
Status : Answered
Chosen Option : 1

Q.21 Which Indian musician is associated with the tabla?

- Ans**
- 1. Ustad Bismillah Khan
 - 2. Zakir Hussain
 - 3. Pandit Ravishankar
 - 4. Ilaiyaraja

Question ID : 264330160976
Option 1 ID : 264330631235
Option 2 ID : 264330631236
Option 3 ID : 264330631237
Option 4 ID : 264330631238
Status : Answered
Chosen Option : 2

Q.22 On whose advice did Gandhiji spend a year travelling around British India to know the people of India?

- Ans
- 1. Krishnashankar Pandya
 - 2. Mohammad Ali Jinnah
 - 3. Shrimad Rajchandra
 - 4. Gopal Krishna Gokhale

Question ID : 264330161744
Option 1 ID : 264330634306
Option 2 ID : 264330634304
Option 3 ID : 264330634305
Option 4 ID : 264330634303
Status : Answered
Chosen Option : 4

Q.23 कौन-सा घाटा सरकार की ऋण-ग्रहण आवश्यकताओं को दर्शाता है?

- Ans
- 1. पूंजीगत घाटा
 - 2. राजस्व घाटा
 - 3. प्राथमिक घाटा
 - 4. राजकोषीय घाटा

Question ID : 264330161582
Option 1 ID : 264330633657
Option 2 ID : 264330633656
Option 3 ID : 264330633655
Option 4 ID : 264330633658
Status : Answered
Chosen Option : 4

Q.24 Which of the following fundamental duties was added to the Indian Constitution by the 86th Constitutional Amendment Act, 2002?

- Ans
- 1. To abide by the Constitution and respect its ideals and institutions, the National Flag and the National Anthem
 - 2. To protect and to improve the natural environment including forests, lakes, rivers and wildlife, and to have compassion for living creatures
 - 3. To provide opportunities for education to his/her child or, as the case may be, ward between the age of six and fourteen years
 - 4. To cherish and follow the noble ideals which inspired our national struggle for freedom

Question ID : 264330162247
Option 1 ID : 264330636315
Option 2 ID : 264330636318
Option 3 ID : 264330636317
Option 4 ID : 264330636316
Status : Answered
Chosen Option : 1

Q.25 शैल कायांतरण के दौरान निम्नलिखित में से कौन-सी चट्टानें बनती हैं?

- Ans
- ✓ 1. स्लेट (Slate)
 - ✗ 2. पिंडशीला (Conglomerate)
 - ✗ 3. बालुकाश्म (Sandstone)
 - ✗ 4. बेसाल्ट (Basalt)

Question ID : 264330157829
Option 1 ID : 264330618675
Option 2 ID : 264330618678
Option 3 ID : 264330618677
Option 4 ID : 264330618676
Status : Not Answered
Chosen Option : --

Section : English Language and Comprehension

Q.1 Select the most appropriate option to fill in the blank.
Dr. APJ Abdul Kalam was a great man with a high level of _____.

- Ans
- ✗ 1. intelligent humour
 - ✗ 2. wise boredom
 - ✓ 3. intellect
 - ✗ 4. clever fatigue

Question ID : 264330153508
Option 1 ID : 264330601543
Option 2 ID : 264330601545
Option 3 ID : 264330601544
Option 4 ID : 264330601546
Status : Answered
Chosen Option : 3

Q.2 The following sentence contains some errors. Select the option that correctly rectifies the error.
The forces that generate conditions conducive to crime and riots are stronger in urban communities than in rural areas.

- Ans
- ✗ 1. The forces that generate conditions conducive to crime and riots are stronger in urban communities than in rural areas.
 - ✗ 2. The forces that generate conditions conducive to crime and riots are stronger in urban communities than in rural areas.
 - ✓ 3. The forces that generate conditions conducive to crime and riots are stronger in urban communities than in rural areas.
 - ✗ 4. The forces that generate conditions conducive to crime and riots are stronger in urban communities than in rural areas.

Question ID : 264330152693
Option 1 ID : 264330598375
Option 2 ID : 264330598378
Option 3 ID : 264330598377
Option 4 ID : 264330598376
Status : Answered
Chosen Option : 3

Q.3 Select the most appropriate option that can substitute the underlined segment in the given sentence.

I found my teacher's points casual and informal in the group discussion.

- Ans 1. flesh and blood
 2. free and easy
 3. foot the bill
 4. fair and square

Question ID : 264330144124
Option 1 ID : 264330564761
Option 2 ID : 264330564760
Option 3 ID : 264330564759
Option 4 ID : 264330564762
Status : Answered
Chosen Option : 4

Q.4 Select the word which means the same as the group of words given.
One who is all powerful.

- Ans 1. Omnipresent
 2. Omnipotent
 3. Optimist
 4. Omniscient

Question ID : 264330152571
Option 1 ID : 264330597887
Option 2 ID : 264330597888
Option 3 ID : 264330597890
Option 4 ID : 264330597889
Status : Answered
Chosen Option : 2

Q.5 Select the most appropriate option that can substitute the underlined segment in the given sentence.

Ramesh is owning a beautiful house in Noida.

- Ans 1. did owned
 2. owns
 3. has owning
 4. was owned

Question ID : 264330152710
Option 1 ID : 264330598442
Option 2 ID : 264330598439
Option 3 ID : 264330598441
Option 4 ID : 264330598440
Status : Answered
Chosen Option : 2

Q.6 Parts of the following sentence have been given as options. Select the option that contains an error.
When Nisha will have finished her task?

- Ans
- 1. have
 - 2. When Nisha will
 - 3. finished
 - 4. her task

Question ID : 264330152817
Option 1 ID : 264330598860
Option 2 ID : 264330598859
Option 3 ID : 264330598861
Option 4 ID : 264330598862
Status : Answered
Chosen Option : 1

Q.7 Select the most appropriate option that can substitute the underlined segment in the given sentence.

He push the bushes aside and went a little farther.

- Ans
- 1. pushed with bush
 - 2. pushing the bush
 - 3. pushes in bush
 - 4. pushed the bushes

Question ID : 264330153471
Option 1 ID : 264330601399
Option 2 ID : 264330601400
Option 3 ID : 264330601401
Option 4 ID : 264330601402
Status : Answered
Chosen Option : 4

Q.8 Select the option that can be used as a one-word substitute for the given group of words.
Copying someone else's work and trying to submit it as your own

- Ans
- 1. Plagiarism
 - 2. Polygamy
 - 3. Preamble
 - 4. Extempore

Question ID : 264330152771
Option 1 ID : 264330598676
Option 2 ID : 264330598678
Option 3 ID : 264330598677
Option 4 ID : 264330598675
Status : Answered
Chosen Option : 1

Q.9 Select the most appropriate meaning of the given idiom.
Beauty of it

- Ans
- 1. Make things worse
 - 2. Cause for dispute
 - 3. Quite ordinary
 - 4. Good points

Question ID : 264330151830
Option 1 ID : 264330594950
Option 2 ID : 264330594948
Option 3 ID : 264330594947
Option 4 ID : 264330594949
Status : Answered
Chosen Option : 4

Q.10 Select the most appropriate synonym of the underlined word.
The girl was manacled and locked in the room.

- Ans
- 1. unfastened
 - 2. liberated
 - 3. fettered
 - 4. unbinded

Question ID : 264330153521
Option 1 ID : 264330601597
Option 2 ID : 264330601595
Option 3 ID : 264330601598
Option 4 ID : 264330601596
Status : Answered
Chosen Option : 3

Q.11 Select the most appropriate ANTONYM of the underlined word.
Addiction of drugs proved detrimental for his health.

- Ans
- 1. Impartial
 - 2. Potential
 - 3. Beneficial
 - 4. Differential

Question ID : 264330151819
Option 1 ID : 264330594906
Option 2 ID : 264330594905
Option 3 ID : 264330594904
Option 4 ID : 264330594903
Status : Answered
Chosen Option : 3

Q.12 Select the most appropriate synonym of the given word.
Plunge

- Ans 1. Transgress
 2. Dive
 3. Rush
 4. Fly

Question ID : 264330151877
Option 1 ID : 264330595129
Option 2 ID : 264330595128
Option 3 ID : 264330595130
Option 4 ID : 264330595127
Status : Answered
Chosen Option : 1

Q.13 Select the INCORRECTLY spelt word.

- Ans 1. Tomatos
 2. Weather
 3. Vehicle
 4. Professor

Question ID : 264330153153
Option 1 ID : 264330600172
Option 2 ID : 264330600174
Option 3 ID : 264330600171
Option 4 ID : 264330600173
Status : Answered
Chosen Option : 1

Q.14 Select the most appropriate option that can rectify the underlined segment in the given sentence. If there is no need to rectify it, select 'no rectification needed'.

I used a variety of sources to find the more cheap flight.

- Ans 1. no rectification needed
 2. cheaper
 3. cheapest
 4. cheap

Question ID : 264330153462
Option 1 ID : 264330601366
Option 2 ID : 264330601363
Option 3 ID : 264330601365
Option 4 ID : 264330601364
Status : Answered
Chosen Option : 3

Q.15 Select the **INCORRECTLY** spelt word in the given sentence.
All the members of my family are planning to visit Jammu and Kashmir this Novembur.

- Ans** 1. Novembur
 2. Planning
 3. Visit
 4. Members

Question ID : 264330153300
Option 1 ID : 264330600755
Option 2 ID : 264330600756
Option 3 ID : 264330600758
Option 4 ID : 264330600757
Status : Answered
Chosen Option : 1

Q.16 Parts of the following sentence have been given as options. Select the option that contains an error.
Ravi will go to the England.

- Ans** 1. the England
 2. will
 3. Ravi
 4. go to

Question ID : 264330152792
Option 1 ID : 264330598762
Option 2 ID : 264330598760
Option 3 ID : 264330598759
Option 4 ID : 264330598761
Status : Marked For Review
Chosen Option : 4

Q.17 Select the most appropriate response in the given situation of the eve of a battle to fill in the blank.
The commander: "Honourable Emperor, all the troops have lined up for the battle and are awaiting your orders." Emperor Chandragupta Maurya:
"_____."

- Ans** 1. We will march at dawn.
 2. You should learn how to talk to an emperor.
 3. We will be playing cards.
 4. We are ready for the pilgrimage.

Question ID : 264330152642
Option 1 ID : 264330598173
Option 2 ID : 264330598174
Option 3 ID : 264330598171
Option 4 ID : 264330598172
Status : Answered
Chosen Option : 1

Q.18 Select the most appropriate meaning of the underlined idiom.
We prefer going to movies once in a blue moon.

- Ans 1. Very rarely
 2. Very amazingly
 3. Very diligently
 4. Very often

Question ID : 264330151833
Option 1 ID : 264330594960
Option 2 ID : 264330594962
Option 3 ID : 264330594961
Option 4 ID : 264330594959
Status : Marked For Review
Chosen Option : 1

Q.19 The following sentence has been split into four segments. Identify the segment that contains an error.
My father told me / that in his childhood / he was walking / to school every day.

- Ans 1. he was walking
 2. that in his childhood
 3. My father told me
 4. to school every day

Question ID : 264330155325
Option 1 ID : 264330608741
Option 2 ID : 264330608740
Option 3 ID : 264330608739
Option 4 ID : 264330608742
Status : Answered
Chosen Option : 1

Q.20 Select the most appropriate meaning of the underlined idiom in the given sentence.

Today's question paper felt like a cakewalk.

- Ans 1. Very sweet
 2. Very tasty
 3. Very easy
 4. Very difficult

Question ID : 264330152878
Option 1 ID : 264330599106
Option 2 ID : 264330599103
Option 3 ID : 264330599105
Option 4 ID : 264330599104
Status : Answered
Chosen Option : 3

Comprehension:

In the following passage some words have been deleted. Fill in the blanks with the help of the alternatives given. Select the most appropriate option for each number.

Modern football (1)_____in Britain in the 19th century. Since before medieval times, 'folk football' games had been played in towns and villages according to local customs and with a (2)_____of rules. Industrialisation and (3)_____, which reduced the amount of leisure time and space available to the working class, combined with a history of legal prohibitions against particularly (4)_____and destructive forms of folk football to undermine the game's status from the early 19th century onward. However, football was taken up as a winter game between residence houses at public (independent) schools such as Winchester, Charterhouse and Eton. Each school had its own rules; some allowed limited handling of the ball and others did not. The (5)_____in rules made it difficult for public schoolboys entering university to continue playing except with former schoolmates.

SubQuestion No : 21

Q.21 Select the most appropriate option to fill in blank no. 1.

- Ans 1. terminated
 2. culminated
 3. originated
 4. fragmented

Question ID : 264330153430

Option 1 ID : 264330601245

Option 2 ID : 264330601244

Option 3 ID : 264330601246

Option 4 ID : 264330601243

Status : Answered

Chosen Option : 3

Comprehension:

In the following passage some words have been deleted. Fill in the blanks with the help of the alternatives given. Select the most appropriate option for each number.

Modern football (1)_____in Britain in the 19th century. Since before medieval times, 'folk football' games had been played in towns and villages according to local customs and with a (2)_____of rules. Industrialisation and (3)_____, which reduced the amount of leisure time and space available to the working class, combined with a history of legal prohibitions against particularly (4)_____and destructive forms of folk football to undermine the game's status from the early 19th century onward. However, football was taken up as a winter game between residence houses at public (independent) schools such as Winchester, Charterhouse and Eton. Each school had its own rules; some allowed limited handling of the ball and others did not. The (5)_____in rules made it difficult for public schoolboys entering university to continue playing except with former schoolmates.

SubQuestion No : 22

Q.22 Select the most appropriate option to fill in blank no. 2.

- Ans 1. optimum
 2. variance
 3. minimum
 4. maximum

Question ID : 264330153431

Option 1 ID : 264330601249

Option 2 ID : 264330601250

Option 3 ID : 264330601248

Option 4 ID : 264330601247

Status : Answered

Chosen Option : 2

Comprehension:

In the following passage some words have been deleted. Fill in the blanks with the help of the alternatives given. Select the most appropriate option for each number.

Modern football (1)_____in Britain in the 19th century. Since before medieval times, 'folk football' games had been played in towns and villages according to local customs and with a (2)_____of rules. Industrialisation and (3)_____, which reduced the amount of leisure time and space available to the working class, combined with a history of legal prohibitions against particularly (4)_____and destructive forms of folk football to undermine the game's status from the early 19th century onward. However, football was taken up as a winter game between residence houses at public (independent) schools such as Winchester, Charterhouse and Eton. Each school had its own rules; some allowed limited handling of the ball and others did not. The (5)_____in rules made it difficult for public schoolboys entering university to continue playing except with former schoolmates.

SubQuestion No : 23

Q.23 Select the most appropriate option to fill in blank no. 3.

- Ans 1. normalisation
 2. urbanisation
 3. standardisation
 4. implementation

Question ID : 264330153432

Option 1 ID : 264330601252

Option 2 ID : 264330601251

Option 3 ID : 264330601253

Option 4 ID : 264330601254

Status : Answered

Chosen Option : 2

Comprehension:

In the following passage some words have been deleted. Fill in the blanks with the help of the alternatives given. Select the most appropriate option for each number.

Modern football (1)_____in Britain in the 19th century. Since before medieval times, 'folk football' games had been played in towns and villages according to local customs and with a (2)_____of rules. Industrialisation and (3)_____, which reduced the amount of leisure time and space available to the working class, combined with a history of legal prohibitions against particularly (4)_____and destructive forms of folk football to undermine the game's status from the early 19th century onward. However, football was taken up as a winter game between residence houses at public (independent) schools such as Winchester, Charterhouse and Eton. Each school had its own rules; some allowed limited handling of the ball and others did not. The (5)_____in rules made it difficult for public schoolboys entering university to continue playing except with former schoolmates.

SubQuestion No : 24

Q.24 Select the most appropriate option to fill in blank no. 4.

- Ans 1. traces
 2. undercurrents
 3. calm
 4. violent

Question ID : 264330153433

Option 1 ID : 264330601258

Option 2 ID : 264330601256

Option 3 ID : 264330601255

Option 4 ID : 264330601257

Status : Answered

Chosen Option : 1

Comprehension:

In the following passage some words have been deleted. Fill in the blanks with the help of the alternatives given. Select the most appropriate option for each number.

Modern football (1)_____in Britain in the 19th century. Since before medieval times, 'folk football' games had been played in towns and villages according to local customs and with a (2)_____of rules. Industrialisation and (3)_____, which reduced the amount of leisure time and space available to the working class, combined with a history of legal prohibitions against particularly (4)_____ and destructive forms of folk football to undermine the game's status from the early 19th century onward. However, football was taken up as a winter game between residence houses at public (independent) schools such as Winchester, Charterhouse and Eton. Each school had its own rules; some allowed limited handling of the ball and others did not. The (5)_____in rules made it difficult for public schoolboys entering university to continue playing except with former schoolmates.

SubQuestion No : 25

Q.25 Select the most appropriate option to fill in blank no. 5.

- Ans 1. grouse
 2. grunt
 3. variance
 4. control

Question ID : 264330153434

Option 1 ID : 264330601259

Option 2 ID : 264330601262

Option 3 ID : 264330601261

Option 4 ID : 264330601260

Status : Answered

Chosen Option : 4

SSC MTS 2023 Tier 1 Sept 14 Shift 2 Question Paper with Answers

Roll Number	
Candidate Name	
Exam Date	14/09/2023
Exam Time	12:30 PM - 2:30 PM
Subject	MTS Non Tech Havaldar CBIC and CBN Examination 2023

Section : Numerical and Mathematical Ability

Q.1 The price of a T-shirt is ₹450, and the price of a jeans is ₹1,650. If you buy three T-shirts and two jeans, what is the average cost of each item?

- Ans**
- 1. ₹900
 - 2. ₹920
 - 3. ₹910
 - 4. ₹930

Question ID : 264330156255

Option 1 ID : 264330612419

Option 2 ID : 264330612421

Option 3 ID : 264330612420

Option 4 ID : 264330612422

Status : Answered

Chosen Option : 4

Q.2 On comparing the following two numeric expressions, we find that _____.

$$\left[\left(2\frac{7}{9}\right)^{2\frac{1}{2}}\right]^{\frac{3}{5}} \text{ and } \left[\left(1\frac{2}{3}\right)^5\right]^{\frac{3}{5}}$$

- Ans**
- 1. both the expressions are equal
 - 2. the first expression is smaller than the second
 - 3. the first expression is larger than the second
 - 4. the given two expressions cannot be compared

Question ID : 264330154113

Option 1 ID : 264330603917

Option 2 ID : 264330603916

Option 3 ID : 264330603915

Option 4 ID : 264330603918

Status : Answered

Chosen Option : 1

Q.3 By selling an article for ₹5,280, Geeta lost 12%. For what amount should she sell it to make a profit of 12%?

- Ans
- 1. ₹6,820
 - 2. ₹7,150
 - 3. ₹5,780
 - 4. ₹6,720

Question ID : 264330159022
Option 1 ID : 264330623447
Option 2 ID : 264330623448
Option 3 ID : 264330623450
Option 4 ID : 264330623449
Status : Answered
Chosen Option : 4

Q.4 Praveen sells a study table to Zoya at a loss of 10%, and Zoya sells the study table to Aadarsh at a profit of 25%. If Aadarsh purchased the study table for ₹2,250, then what was the cost (in ₹) of the study table for Praveen?

- Ans
- 1. 2,000
 - 2. 2,100
 - 3. 1,800
 - 4. 1,900

Question ID : 264330155711
Option 1 ID : 264330610249
Option 2 ID : 264330610250
Option 3 ID : 264330610247
Option 4 ID : 264330610248
Status : Answered
Chosen Option : 1

Q.5 Suresh could save 20% of his income. But 4 years later, when his income increased by 40%, he could save the same amount only as before. By how much percentage did his expenditure increase?

- Ans
- 1. 23%
 - 2. 50%
 - 3. 22%
 - 4. 45%

Question ID : 264330157325
Option 1 ID : 264330616663
Option 2 ID : 264330616664
Option 3 ID : 264330616666
Option 4 ID : 264330616665
Status : Answered
Chosen Option : 2

Q.6 If Mohit, Nitu and Soma can complete a piece of work in 5 days, 6 days and 8 days, respectively, then in how many days will the work be completed if they work on alternate days starting with Mohit on first day, then Nitu on second day, then Soma on third day, then Mohit on fourth day and so on.

- Ans**
- 1. $5\frac{7}{12}$
 - 2. $7\frac{1}{60}$
 - 3. $4\frac{7}{15}$
 - 4. $6\frac{1}{12}$

Question ID : 264330156196

Option 1 ID : 264330612185

Option 2 ID : 264330612186

Option 3 ID : 264330612183

Option 4 ID : 264330612184

Status : Answered

Chosen Option : 4

Q.7 A triangle has its sides 5 cm, 12 cm and 13 cm. What will be the area of the triangle formed by joining the mid point of the three sides?

- Ans**
- 1. $7\frac{1}{2}$ cm²
 - 2. $19\frac{1}{2}$ cm²
 - 3. $13\frac{1}{2}$ cm²
 - 4. 15 cm²

Question ID : 264330156501

Option 1 ID : 264330613392

Option 2 ID : 264330613393

Option 3 ID : 264330613394

Option 4 ID : 264330613391

Status : Answered

Chosen Option : 4

Q.8 A sum of ₹800 amounts to ₹1,040 in 3 years at simple interest. If the interest rate is increased by 3%, find the amount.

- Ans**
- 1. ₹1,102
 - 2. ₹1,212
 - 3. ₹1,112
 - 4. ₹1,012

Question ID : 264330156002

Option 1 ID : 264330611407

Option 2 ID : 264330611408

Option 3 ID : 264330611410

Option 4 ID : 264330611409

Status : Answered

Chosen Option : 3

Q.9 If a person walks at 18 km/hr instead of 12 km/hr, he would have walked 24 km more. What is the actual distance travelled by him?

- Ans**
- 1. 52 km
 - 2. 60 km
 - 3. 55 km
 - 4. 48 km

Question ID : 264330156289
Option 1 ID : 264330612557
Option 2 ID : 264330612555
Option 3 ID : 264330612558
Option 4 ID : 264330612556
Status : Answered
Chosen Option : 4

Q.10 If $A : B = 2 : 1$ and $B : C = 1 : 3$, then $C : A$ is:

- Ans**
- 1. 3 : 1
 - 2. 2 : 3
 - 3. 3 : 2
 - 4. 1 : 3

Question ID : 264330153873
Option 1 ID : 264330602956
Option 2 ID : 264330602955
Option 3 ID : 264330602957
Option 4 ID : 264330602958
Status : Answered
Chosen Option : 3

Q.11 Find the smallest three digit number which when added to 5 is exactly divisible by 12, 14 and 18.

- Ans**
- 1. 240
 - 2. 225
 - 3. 245
 - 4. 247

Question ID : 264330155985
Option 1 ID : 264330611340
Option 2 ID : 264330611342
Option 3 ID : 264330611339
Option 4 ID : 264330611341
Status : Answered
Chosen Option : 4

Q.12 A, B and C working separately can do a piece of work in 11 days, 20 days and 55 days, respectively. If they work together, then the time taken to complete the work is:

- Ans**
- ✓ 1. $6\frac{2}{7}$ days
 - ✗ 2. $5\frac{1}{7}$ days
 - ✗ 3. $4\frac{1}{7}$ days
 - ✗ 4. $\frac{1}{7}$ days

Question ID : 264330156532

Option 1 ID : 264330613516

Option 2 ID : 264330613515

Option 3 ID : 264330613517

Option 4 ID : 264330613518

Status : Answered

Chosen Option : 1

Q.13 The weight of a cube varies directly as the product of its volume and its density. The ratio of densities of the materials of the first cube and second cube is 27 : 16. If the weight of the first cube is 4 times the weight of the second cube, then what is the ratio of the edges of the first cube and second cube?

- Ans**
- ✗ 1. 2 : 3
 - ✗ 2. 3 : 2
 - ✗ 3. 3 : 4
 - ✓ 4. 4 : 3

Question ID : 264330156308

Option 1 ID : 264330612633

Option 2 ID : 264330612634

Option 3 ID : 264330612632

Option 4 ID : 264330612631

Status : Answered

Chosen Option : 4

Q.14 The height of a right circular cone is 20 cm, and its base diameter is 30 cm. What is the curved surface area and the total surface area of the right circular cone, respectively?

- Ans**
- ✗ 1. $335\pi \text{ cm}^2$ and $525\pi \text{ cm}^2$
 - ✗ 2. $390\pi \text{ cm}^2$ and $475\pi \text{ cm}^2$
 - ✗ 3. $450\pi \text{ cm}^2$ and $625\pi \text{ cm}^2$
 - ✓ 4. $375\pi \text{ cm}^2$ and $600\pi \text{ cm}^2$

Question ID : 264330156201

Option 1 ID : 264330612204

Option 2 ID : 264330612203

Option 3 ID : 264330612205

Option 4 ID : 264330612206

Status : Answered

Chosen Option : 4

Q.15 Study the given table and answer the question that follows.

The table gives the percentage of marks obtained by five students in five different subjects.

Students	Subjects (Max Marks = 100)				
	Mathematics	Physics	Chemistry	English	Hindi
Rahul	60	80	75	70	80
Vijay	80	90	80	75	85
Nani	70	80	70	70	80
Ganesh	80	75	60	60	65
Rohit	70	70	50	50	75

What is the average marks obtained by all the five students in Mathematics?

- Ans
- 1. 70
 - 2. 75
 - 3. 72
 - 4. 65

Question ID : 264330157333

Option 1 ID : 264330616698

Option 2 ID : 264330616696

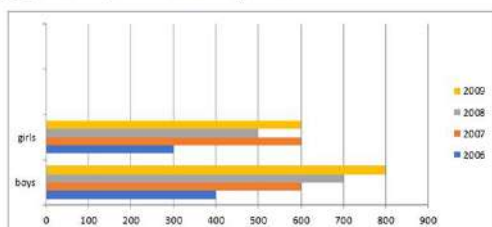
Option 3 ID : 264330616695

Option 4 ID : 264330616697

Status : Answered

Chosen Option : 3

Q.16 The following bar graph indicates the enrolment of boys and girls in a school during the years 2006-2009. Study the bar graph carefully and answer the question.



Find the ratio of the total number of boys to girls enrolled in all the years 2006 to 2009.

- Ans
- 1. 3 : 4
 - 2. 3 : 5
 - 3. 5 : 3
 - 4. 5 : 4

Question ID : 264330153857

Option 1 ID : 264330602891

Option 2 ID : 264330602893

Option 3 ID : 264330602892

Option 4 ID : 264330602894

Status : Answered

Chosen Option : 4

Q.17 Money is doubled in a bank account in 7 years, when the interest is compounded annually. What time in years is needed to make an amount 8 times in the bank?

- Ans
- 1. 21
 - 2. 14
 - 3. 35
 - 4. 28

Question ID : 264330156284
Option 1 ID : 264330612537
Option 2 ID : 264330612535
Option 3 ID : 264330612538
Option 4 ID : 264330612536
Status : Answered
Chosen Option : 1

Q.18 A car travels 200 km at a speed of 50 km/h and then travels another 200 km at a speed of 80 km/h. What is the average speed of the car for the entire journey? (round to two places of decimals)

- Ans
- 1. 59.75km/h
 - 2. 60.24 km/h
 - 3. 61.54 km/h
 - 4. 62.53 km/h

Question ID : 264330156258
Option 1 ID : 264330612431
Option 2 ID : 264330612432
Option 3 ID : 264330612433
Option 4 ID : 264330612434
Status : Answered
Chosen Option : 3

Q.19 A thief noticed a policeman from a distance of 300 m and started to run at a speed of 12 km/h. The policeman chased at a speed of 13 km/h and he caught the thief. What was the distance run by the thief?

- Ans
- 1. 7200 m
 - 2. 4800 m
 - 3. 1800 m
 - 4. 3600 m

Question ID : 264330154056
Option 1 ID : 264330603688
Option 2 ID : 264330603690
Option 3 ID : 264330603687
Option 4 ID : 264330603689
Status : Answered
Chosen Option : 4

Q.20 S gets 65, 74, 62, 68 and 68 marks in Hindi, English, Mathematics, Physics and Chemistry, respectively. His average marks in Mathematics, Hindi and English are _____ more than the average marks in Mathematics, Physics and Chemistry.

- Ans**
- 1. 0.5
 - 2. 1.33
 - 3. 1.67
 - 4. 1

Question ID : **264330153798**
Option 1 ID : **264330602655**
Option 2 ID : **264330602657**
Option 3 ID : **264330602658**
Option 4 ID : **264330602656**
Status : **Answered**
Chosen Option : **4**

Section : Reasoning Ability and Problem Solving

Q.1 What should come in place of ? in the given series?

41 43 47 53 61 ?

- Ans**
- 1. 73
 - 2. 74
 - 3. 71
 - 4. 72

Question ID : **264330151541**
Option 1 ID : **264330593793**
Option 2 ID : **264330593794**
Option 3 ID : **264330593791**
Option 4 ID : **264330593792**
Status : **Answered**
Chosen Option : **3**

Q.2 Which figure should replace the question mark (?) if the following figure series were to be continued?

R	C	O	2	E	♡	R	S	
O	♡	E	S	C	R	R	O	2
2	S	♡	E	S	C	O	2	?

Ans

✗ 1.

2	O
E	C
S	R

✗ 2.

2	E
S	R
C	♡

✗ 3.

2	R
E	C
S	O

✓ 4.

2	O
E	R
C	♡

Question ID : 264330154755
 Option 1 ID : 264330606486
 Option 2 ID : 264330606485
 Option 3 ID : 264330606484
 Option 4 ID : 264330606483
 Status : Answered
 Chosen Option : 4

Q.3 Find out the correct alternative that when filled in the blanks in the same sequence will make the series logically complete.

B_KPBN_R_OKTB_KVBQK_

- Ans
- ✗ 1. SJORN
 - ✓ 2. MKBPX
 - ✗ 3. JFIEH
 - ✗ 4. MFHID

Question ID : 264330154723
 Option 1 ID : 264330606358
 Option 2 ID : 264330606356
 Option 3 ID : 264330606357
 Option 4 ID : 264330606355
 Status : Answered
 Chosen Option : 2

Q.4 What will come in place of '?' in the following equation, if '+' and '×' are interchanged and '×' and '-' are interchanged?

$$12 - 6 \div 3 + 3 \times 7 = ?$$

- Ans**
- 1. 66
 - 2. 14
 - 3. 11
 - 4. 33

Question ID : 264330154663

Option 1 ID : 264330606116

Option 2 ID : 264330606118

Option 3 ID : 264330606115

Option 4 ID : 264330606117

Status : Answered

Chosen Option : 1

Q.5 In a certain code language, 'DIAL' is coded as '1326' and 'IDLE' is coded as '6183'. What is the code for 'E' in the given code language?

- Ans**
- 1. 1
 - 2. 8
 - 3. 3
 - 4. 6

Question ID : 264330151695

Option 1 ID : 264330594407

Option 2 ID : 264330594410

Option 3 ID : 264330594408

Option 4 ID : 264330594409

Status : Answered

Chosen Option : 2

Q.6 If F means '-', C means '×', D means '+', B means '÷', then what will come in place of the question mark (?) in the following equation?

$$44 \text{ F } 18 \text{ C } 3 \text{ B } 108 \text{ D } 6 = ?$$

- Ans**
- 1. 8
 - 2. 18
 - 3. 6
 - 4. 16

Question ID : 264330154680

Option 1 ID : 264330606184

Option 2 ID : 264330606186

Option 3 ID : 264330606183

Option 4 ID : 264330606185

Status : Answered

Chosen Option : 1

Q.7 Select the option figure in which the given figure (X) is embedded as its part (rotation is NOT allowed).



(X)

Ans

✗ 1.



✗ 2.



✗ 3.



✓ 4.



Question ID : 264330151730

Option 1 ID : 264330594548

Option 2 ID : 264330594547

Option 3 ID : 264330594549

Option 4 ID : 264330594550

Status : Answered

Chosen Option : 4

Q.8 What should come in place of ? in the given series based on the English alphabetical order?

HPA, KTD, NXG, QBJ, ?

✗ 1. UEM

✓ 2. TFM

✗ 3. SEN

✗ 4. SFN

Question ID : 264330155782

Option 1 ID : 264330610531

Option 2 ID : 264330610534

Option 3 ID : 264330610533

Option 4 ID : 264330610532

Status : Answered

Chosen Option : 2

Q.9 In the following number-pairs, the second number is obtained by applying certain mathematical operations to the first number. Select the set in which the numbers are related in the same way as are the numbers of the following sets.

(NOTE: Operations should be performed on the whole numbers, without breaking down the numbers into its constituent digits. E.g. 13 – Operations on 13 such as adding / subtracting / multiplying etc. to 13 can be performed. Breaking down 13 into 1 and 3 and then performing mathematical operations on 1 and 3 is not allowed)

7, 50

15, 226

- Ans**
- 1. 21, 445
 - 2. 11, 131
 - 3. 14, 162
 - 4. 17, 290

Question ID : 264330151621

Option 1 ID : 264330594114

Option 2 ID : 264330594111

Option 3 ID : 264330594112

Option 4 ID : 264330594113

Status : Answered

Chosen Option : 4

Q.10 Read the given statements and conclusions carefully. You have to take the given statements to be true even if they seem to be at variance from commonly known facts. You have to decide which conclusion/s logically follow/s from the given statements.

Statements: Some schools are big. All big are malls. No mall is cheap.

Conclusion I: All big are schools.

Conclusion II: Some malls are big.

- Ans**
- 1. Both conclusions (I) and (II) are follow.
 - 2. Only conclusion (II) is follow.
 - 3. Only conclusion (I) is follow.
 - 4. Neither conclusion (I) nor (II) is follow.

Question ID : 264330155895

Option 1 ID : 264330610986

Option 2 ID : 264330610984

Option 3 ID : 264330610983

Option 4 ID : 264330610985

Status : Answered

Chosen Option : 1

Q.11 Read the given statements and conclusions carefully. You have to take the given statements to be true even if they seem to be at variance from commonly known facts. You have to decide which conclusion/s logically follow/s from the given statements.

Statements: All trash are rags. Some rags are big. All big are crabs.

Conclusion I: All big are rags.

Conclusion II: Some crabs are rags.

- Ans**
- 1. Both conclusions (I) and (II) are follow.
 - 2. Only conclusion (I) is follow.
 - 3. Neither conclusion (I) nor (II) is follow.
 - 4. Only conclusion (II) is follow.

Question ID : 264330155909

Option 1 ID : 264330611042

Option 2 ID : 264330611039

Option 3 ID : 264330611041

Option 4 ID : 264330611040

Status : Answered

Chosen Option : 1

Q.12 OE 13 is related to MC 17 in a certain way. In the same way, FL 16 is related to DJ 20. To which of the following is RD 15 related to following the same logic?

- Ans**
- 1. SF 18
 - 2. QE 18
 - 3. PB 19
 - 4. PC 19

Question ID : 264330151676

Option 1 ID : 264330594334

Option 2 ID : 264330594331

Option 3 ID : 264330594332

Option 4 ID : 264330594333

Status : Answered

Chosen Option : 3

Q.13 In the following number-pairs, the second number is obtained by applying certain mathematical operations to the first number. Select the set in which the numbers are related in the same way as are the numbers of the following sets. (NOTE: Operations should be performed on the whole numbers, without breaking down the numbers into its constituent digits. E.g. 13 – Operations on 13 such as adding /deleting /multiplying etc. to 13 can be performed. Breaking down 13 into 1 and 3 and then performing mathematical operations on 1 and 3 is not allowed)

3 : 7
5 : 23

- Ans**
- 1. 6 : 34
 - 2. 8 : 64
 - 3. 9 : 80
 - 4. 4 : 18

Question ID : 264330154651

Option 1 ID : 264330606069

Option 2 ID : 264330606068

Option 3 ID : 264330606067

Option 4 ID : 264330606070

Status : Answered

Chosen Option : 1

Q.14 What should come in place of ? in the given series?

16 17 20 21 24 ?

- Ans
- 1. 30
 - 2. 25
 - 3. 28
 - 4. 27

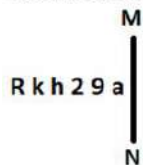
Question ID : 264330151721
 Option 1 ID : 264330594513
 Option 2 ID : 264330594511
 Option 3 ID : 264330594512
 Option 4 ID : 264330594514
 Status : Answered
 Chosen Option : 2

Q.15 If 3rd Oct 2011 is Monday, then what will be the day of the week on 4th Nov 2021?

- Ans
- 1. Friday
 - 2. Tuesday
 - 3. Thursday
 - 4. Monday

Question ID : 264330154337
 Option 1 ID : 264330604813
 Option 2 ID : 264330604814
 Option 3 ID : 264330604812
 Option 4 ID : 264330604811
 Status : Answered
 Chosen Option : 2

Q.16 Select the correct mirror image of the given figure when the mirror is placed at MN as shown below.



- Ans
- 1. R k h 2 9 a
 - 2. R k h 2 9 a
 - 3. R k h 2 9 a
 - 4. R k h 2 9 a

Question ID : 264330151527
 Option 1 ID : 264330593736
 Option 2 ID : 264330593735
 Option 3 ID : 264330593738
 Option 4 ID : 264330593737
 Status : Answered
 Chosen Option : 2

Q.17 What should come in place of '?' in the given series?

13 34 76 160 328 ?

- Ans
- 1. 625
 - 2. 664
 - 3. 672
 - 4. 638

Question ID : 264330151466

Option 1 ID : 264330593491

Option 2 ID : 264330593493

Option 3 ID : 264330593494

Option 4 ID : 264330593492

Status : Answered

Chosen Option : 2

Q.18 In a certain code language, 'ENTER' is coded as 'FOTGT' and 'DICEY' is coded as 'EJCGA'. What is the code for 'CHILD' in the given code language?

- Ans
- 1. DIINF
 - 2. DHIME
 - 3. EJJNE
 - 4. EHIMF

Question ID : 264330155831

Option 1 ID : 264330610727

Option 2 ID : 264330610730

Option 3 ID : 264330610728

Option 4 ID : 264330610729

Status : Answered

Chosen Option : 1

Q.19 Six people, Kajal, Neetu, Lovey, Omar, Meenu and Jay are sitting in a straight line, facing north. Lovey sits 3rd from the left end. Neetu sits 2nd to the right of Lovey. Omar sits to the immediate right of Neetu. Meenu sits 2nd to the left of Omar. Kajal sits 2nd to the left of Meenu. Who sits to the immediate left of Lovey?

- Ans
- 1. Kajal
 - 2. Meenu
 - 3. Omar
 - 4. Jay

Question ID : 264330155662

Option 1 ID : 264330610051

Option 2 ID : 264330610053

Option 3 ID : 264330610052

Option 4 ID : 264330610054

Status : Answered

Chosen Option : 1

Q.20 Select the combination of letters that when sequentially placed in the blanks of the given series, will complete the series.

C _ D _ DD _ _ D C _ D

- Ans**
- 1. DDCCD
 - 2. DCCDD
 - 3. CCDCC
 - 4. DCDCD

Question ID : 264330151642
Option 1 ID : 264330594196
Option 2 ID : 264330594195
Option 3 ID : 264330594198
Option 4 ID : 264330594197
Status : Answered
Chosen Option : 2

Section : General Awareness

Q.1 Swami Dayanand Saraswati founded a reform organisation in 1875 that attempted to reform Hinduism. What was it called?

- Ans**
- 1. Arya Samaj
 - 2. Prarthna Samaj
 - 3. Satyashodhak Samaj
 - 4. Brahmo Samaj

Question ID : 264330161743
Option 1 ID : 264330634300
Option 2 ID : 264330634301
Option 3 ID : 264330634302
Option 4 ID : 264330634299
Status : Answered
Chosen Option : 1

Q.2 The Brihadeswara Temple at Tanjavur built by:

- Ans**
- 1. Rajaraja II
 - 2. Samudragupta
 - 3. Rajendra Chola
 - 4. Rajaraja I

Question ID : 264330160783
Option 1 ID : 264330630466
Option 2 ID : 264330630463
Option 3 ID : 264330630464
Option 4 ID : 264330630465
Status : Answered
Chosen Option : 4

Q.3 Which diseases result from a deficiency of Vitamin B due to its insufficient intake?

- Ans**
- 1. Colour blindness
 - 2. Rickets
 - 3. Beri Beri
 - 4. Scurvy

Question ID : **264330157809**
Option 1 ID : **264330618595**
Option 2 ID : **264330618596**
Option 3 ID : **264330618598**
Option 4 ID : **264330618597**
Status : **Answered**
Chosen Option : **3**

Q.4 What is the minimum voting age for the citizens of India?

- Ans**
- 1. 18 years
 - 2. 21 years
 - 3. 30 years
 - 4. 25 years

Question ID : **264330159915**
Option 1 ID : **264330627007**
Option 2 ID : **264330627008**
Option 3 ID : **264330627010**
Option 4 ID : **264330627009**
Status : **Answered**
Chosen Option : **1**

Q.5 Who among the following singers had a Guinness World Record for recording 28 songs in a single day? (As of December 2022.)

- Ans**
- 1. Sonu Nigam
 - 2. Udit Narayan
 - 3. Kumar Sanu
 - 4. Arijit Singh

Question ID : **264330155515**
Option 1 ID : **264330609464**
Option 2 ID : **264330609465**
Option 3 ID : **264330609466**
Option 4 ID : **264330609463**
Status : **Answered**
Chosen Option : **3**

Q.6 'Anandamath' is a famous _____ novel which was written by Bankim Chandra Chatterjee.

- Ans
- 1. Gujarati
 - 2. Rajasthani
 - 3. Punjabi
 - 4. Bengali

Question ID : 264330155500
Option 1 ID : 264330609405
Option 2 ID : 264330609403
Option 3 ID : 264330609406
Option 4 ID : 264330609404
Status : Answered
Chosen Option : 4

Q.7 The four Nattuvanars namely Ponaiyah, Vadivelu, Sivanandam and Chinnaia, who are renowned as Tanjore Bandhu shaped up the modern day _____.

- Ans
- 1. Bharatanatyam
 - 2. Kuchipudi
 - 3. Kodiattam
 - 4. Kathakali

Question ID : 264330160806
Option 1 ID : 264330630556
Option 2 ID : 264330630557
Option 3 ID : 264330630555
Option 4 ID : 264330630558
Status : Answered
Chosen Option : 1

Q.8 In February 2023, Uttar Pradesh government launched a/an _____ called Family ID-One Family One Identity.

- Ans
- 1. Portal
 - 2. News letter
 - 3. WhatsApp Group
 - 4. Email Id

Question ID : 264330158328
Option 1 ID : 264330620673
Option 2 ID : 264330620674
Option 3 ID : 264330620671
Option 4 ID : 264330620672
Status : Answered
Chosen Option : 1

Q.9 Which of the following statements is best related to the 'pacific ring of fire'?

- Ans
- 1. Known for thermal power station
 - 2. Known for volcano and earthquakes
 - 3. Known for only glacial formations
 - 4. Known for tropical rainforests

Question ID : 264330157832
Option 1 ID : 264330618687
Option 2 ID : 264330618688
Option 3 ID : 264330618690
Option 4 ID : 264330618689
Status : Answered
Chosen Option : 2

Q.10 Why are intermediate goods NOT included in the calculation of national income?

- Ans
- 1. Including intermediate goods would result in double counting.
 - 2. Intermediate goods are not produced within the country's borders.
 - 3. Including intermediate goods would decrease the value of national income.
 - 4. Intermediate goods are not important for measuring economic activity.

Question ID : 264330157313
Option 1 ID : 264330616616
Option 2 ID : 264330616615
Option 3 ID : 264330616618
Option 4 ID : 264330616617
Status : Answered
Chosen Option : 1

Q.11 According to the Global Multidimensional Poverty Index (MPI) 2021, India's rank is _____ out of 109 countries.

- Ans
- 1. 66th
 - 2. 71st
 - 3. 59th
 - 4. 63rd

Question ID : 264330166018
Option 1 ID : 264330651149
Option 2 ID : 264330651150
Option 3 ID : 264330651147
Option 4 ID : 264330651148
Status : Not Answered
Chosen Option : --

Q.12 The tribal dancer and singer, Arjun Singh Dhurve from _____ has been conferred with ' Padma Shri' in the year 2022.

- Ans**
- 1. Karnataka
 - 2. Tamil Nadu
 - 3. Madhya Pradesh
 - 4. Andhra Pradesh

Question ID : 264330155530
Option 1 ID : 264330609523
Option 2 ID : 264330609524
Option 3 ID : 264330609526
Option 4 ID : 264330609525
Status : Not Answered
Chosen Option : --

Q.13 What is the main purpose of a bank statement?

- Ans**
- 1. To track income and expenses
 - 2. To transfer funds to another account
 - 3. To advertise new banking products
 - 4. To have locker facility in the bank

Question ID : 264330157305
Option 1 ID : 264330616583
Option 2 ID : 264330616586
Option 3 ID : 264330616584
Option 4 ID : 264330616585
Status : Answered
Chosen Option : 1

Q.14 The Konark Dance Festival (KDF) has been held at Konark since 1986 between _____ every year.

- Ans**
- 1. 1st and 5th October
 - 2. 1st and 5th August
 - 3. 1st and 5th January
 - 4. 1st and 5th December

Question ID : 264330160838
Option 1 ID : 264330630685
Option 2 ID : 264330630684
Option 3 ID : 264330630683
Option 4 ID : 264330630686
Status : Not Answered
Chosen Option : --

Q.15 Identify the southernmost range of the Himalaya from the following.

- Ans**
- 1. Shiwaliks Range
 - 2. Trans Himalaya Range
 - 3. Lesser Himalaya Range
 - 4. Greater Himalaya Range

Question ID : 264330161529
Option 1 ID : 264330633443
Option 2 ID : 264330633446
Option 3 ID : 264330633444
Option 4 ID : 264330633445
Status : Not Answered
Chosen Option : --

Q.16 राज्य के नीति निदेशक सिद्धांतों के बारे में निम्नलिखित में से कौन-सा कथन सही नहीं है?

- Ans
- 1. पुरुष, स्त्री और बच्चों के लिए उपर्युक्त रोजगार और कार्य का स्वच्छ वातवरण सुनिश्चित करना
 - 2. स्त्री और पुरुष दोनों के लिए आजीविका के पर्याप्त साधन उपलब्ध कराना
 - 3. केवल पुरुषों के लिए समान कार्य के लिए समान पारिश्रमिक सुनिश्चित करना
 - 4. कुछ हाथों में संपत्ति के संकेंद्रण को रोकने के लिए आर्थिक व्यवस्था को पुनर्गठित करना

Question ID : 264330162149

Option 1 ID : 264330635926

Option 2 ID : 264330635923

Option 3 ID : 264330635925

Option 4 ID : 264330635924

Status : Answered

Chosen Option : 3

Q.17 निम्नलिखित में से कौन-सी घटना 1919 में घटित हुई थी?

- Ans
- 1. चार्टर एक्ट का नवीनीकरण
 - 2. जनप्रतिनिधित्व अधिनियम पारित किया गया
 - 3. ठगी एवं डकैती दमन अधिनियम पारित किया गया
 - 4. रौलेट एक्ट के विरुद्ध सत्याग्रह

Question ID : 264330160877

Option 1 ID : 264330630839

Option 2 ID : 264330630842

Option 3 ID : 264330630841

Option 4 ID : 264330630840

Status : Answered

Chosen Option : 4

Q.18 The novel 'Train to Pakistan' was written by _____.

- Ans
- 1. Khushwant Singh
 - 2. Nawaz Sharif
 - 3. Zakir Hussain
 - 4. Imran Khan

Question ID : 264330160972

Option 1 ID : 264330631221

Option 2 ID : 264330631219

Option 3 ID : 264330631222

Option 4 ID : 264330631220

Status : Answered

Chosen Option : 1

Q.19 Popular Bollywood actor Kriti Sanon is a trained _____ dancer.

- Ans
- 1. Kuchipudi
 - 2. Kathak
 - 3. Odissi
 - 4. Bharatanatyam

Question ID : 264330159069

Option 1 ID : 264330623636

Option 2 ID : 264330623637

Option 3 ID : 264330623638

Option 4 ID : 264330623635

Status : Answered

Chosen Option : 4

Q.20 In which of the following cities was the final match of the 2022 Vijay Hazare Trophy held?

- Ans 1. Ahmedabad
 2. Raipur
 3. Lucknow
 4. Ranchi

Question ID : 264330161156
Option 1 ID : 264330631957
Option 2 ID : 264330631955
Option 3 ID : 264330631958
Option 4 ID : 264330631956
Status : Not Answered
Chosen Option : --

Q.21 Who started the chemical revolution in the 18th century by naming oxygen and helping to organize chemical nomenclature?

- Ans 1. Dame Kathleen Lonsdale
 2. Svante August Arrhenius
 3. Joseph Priestley
 4. Antoine-Laurent Lavoisier

Question ID : 264330161048
Option 1 ID : 264330631524
Option 2 ID : 264330631523
Option 3 ID : 264330631526
Option 4 ID : 264330631525
Status : Not Answered
Chosen Option : --

Q.22 Aman Sehrawat became the first Indian to win a gold medal in World Wrestling Championship in which category?

- Ans 1. U-15
 2. U-20
 3. U-23
 4. U-25

Question ID : 264330158372
Option 1 ID : 264330620847
Option 2 ID : 264330620848
Option 3 ID : 264330620849
Option 4 ID : 264330620850
Status : Answered
Chosen Option : 1

Q.23 Independence Day is celebrated every year in Pakistan on _____.

- Ans 1. 30 January
 2. 14 August
 3. 31 December
 4. 23 March

Question ID : 264330161565
Option 1 ID : 264330633588
Option 2 ID : 264330633587
Option 3 ID : 264330633589
Option 4 ID : 264330633590
Status : Answered
Chosen Option : 2

Q.24 Which of the following Indian musicians was called 'Mallika-e-Ghazal'?

- Ans 1. Prabha Bharti
 2. Begum Akhtar
 3. Chitra Singh
 4. Farida Khanum

Question ID : 264330161777
Option 1 ID : 264330634437
Option 2 ID : 264330634435
Option 3 ID : 264330634436
Option 4 ID : 264330634438
Status : Answered
Chosen Option : 2

Q.25 The word 'yorker' is related to which sport?

- Ans 1. Kho Kho
 2. Cricket
 3. Basketball
 4. Kabaddi

Question ID : 264330158243
Option 1 ID : 264330620333
Option 2 ID : 264330620334
Option 3 ID : 264330620331
Option 4 ID : 264330620332
Status : Not Answered
Chosen Option : --

Section : English Language and Comprehension

Q.1 Select the most appropriate option to fill in the blank.

I wish we had _____ come here.

- Ans 1. right
 2. clear
 3. never
 4. agreed

Question ID : 264330153495
Option 1 ID : 264330601495
Option 2 ID : 264330601496
Option 3 ID : 264330601498
Option 4 ID : 264330601497
Status : Answered
Chosen Option : 3

Q.2 Select the most appropriate ANTONYM of the given word.
Carnal

- Ans 1. Material
 2. Spiritual
 3. Temporal
 4. Somatic

Question ID : 264330153577
Option 1 ID : 264330601805
Option 2 ID : 264330601806
Option 3 ID : 264330601803
Option 4 ID : 264330601804
Status : Answered
Chosen Option : 1

Q.3 Select the option that can be used as a one-word substitute for the given group of words.
Fail to function normally

- Ans 1. Maltreat
 2. Mangle
 3. Manipulate
 4. Malfunction

Question ID : 264330151908
Option 1 ID : 264330595247
Option 2 ID : 264330595248
Option 3 ID : 264330595249
Option 4 ID : 264330595250
Status : Answered
Chosen Option : 4

Q.4 Select the most appropriate meaning of the given phrase.

All of a sudden

- Ans 1. Intentionally
 2. Quickly and unexpectedly
 3. Quickly and Expectedly
 4. Accidentally

Question ID : 264330155394
Option 1 ID : 264330608987
Option 2 ID : 264330608989
Option 3 ID : 264330608988
Option 4 ID : 264330608990
Status : Answered
Chosen Option : 2

Q.5 The following sentence has been split into four segments. Identify the segment that contains a grammatical error.

My daughter was / invited to lunch / hosted by the Governor / at his residence.

- Ans 1. at his residence
 2. invited to lunch
 3. hosted by the Governor
 4. My daughter was

Question ID : 264330155412
Option 1 ID : 264330609058
Option 2 ID : 264330609056
Option 3 ID : 264330609057
Option 4 ID : 264330609055
Status : Answered
Chosen Option : 2

Q.6 Select the INCORRECTLY spelt word.

- Ans 1. Resist
 2. Rectifie
 3. Recruit
 4. Repulse

Question ID : 264330151924
Option 1 ID : 264330595313
Option 2 ID : 264330595311
Option 3 ID : 264330595312
Option 4 ID : 264330595314
Status : Answered
Chosen Option : 2

Q.7 Select the option that rectifies the spelling of the underlined word in the given sentence.

The maintenance department did a fabulous job.

- Ans 1. mainteanance
 2. maintenance
 3. maintenannce
 4. meintenance

Question ID : 264330153155
Option 1 ID : 264330600182
Option 2 ID : 264330600179
Option 3 ID : 264330600180
Option 4 ID : 264330600181
Status : Answered
Chosen Option : 2

Q.8 Select the most appropriate synonym of the bracketed word in the following sentence to fill in the blank.

The novel's intricate plot and rich character development kept readers _____ (committed) from the beginning to the end.

Ans 1. engaged

2. secluded

3. detached

4. dismantled

Question ID : 264330152658

Option 1 ID : 264330598236

Option 2 ID : 264330598238

Option 3 ID : 264330598237

Option 4 ID : 264330598235

Status : Answered

Chosen Option : 1

Q.9 Select the most appropriate meaning of the underlined idiom.

These things are very hard to swallow.

Ans 1. difficult to resist

2. difficult to speak

3. difficult to believe

4. difficult to eat

Question ID : 264330143186

Option 1 ID : 264330561022

Option 2 ID : 264330561021

Option 3 ID : 264330561020

Option 4 ID : 264330561019

Status : Answered

Chosen Option : 3

Q.10 Select the most appropriate idiom to fill in the blank.

The decision to go on a trip after my vacations was the _____.

Ans 1. ice on the cake

2. icing on the cake

3. apple on the cake

4. icing on the brownie

Question ID : 264330153078

Option 1 ID : 264330599876

Option 2 ID : 264330599877

Option 3 ID : 264330599878

Option 4 ID : 264330599875

Status : Answered

Chosen Option : 2

Q.11 The following sentence has been split into four segments. Identify the segment that contains a grammatical error.

The new software / consists from / several features / and tools.

- Ans 1. consists from
 2. several features
 3. and tools
 4. The new software

Question ID : 264330155430
Option 1 ID : 264330609128
Option 2 ID : 264330609129
Option 3 ID : 264330609130
Option 4 ID : 264330609127
Status : Answered
Chosen Option : 1

Q.12 Select the most appropriate idiom to fill in the blank.
It's easy to say that you'll start exercising every day, but it is _____.

- Ans 1. like fish out of water
 2. easier said than done
 3. crying wolf
 4. going the extra mile

Question ID : 264330151887
Option 1 ID : 264330595168
Option 2 ID : 264330595167
Option 3 ID : 264330595170
Option 4 ID : 264330595169
Status : Answered
Chosen Option : 2

Q.13 Select the INCORRECTLY spelt word.

- Ans 1. Paralycis
 2. Lyricist
 3. Indigestion
 4. Patron

Question ID : 264330151927
Option 1 ID : 264330595324
Option 2 ID : 264330595325
Option 3 ID : 264330595326
Option 4 ID : 264330595323
Status : Answered
Chosen Option : 1

Q.14 Select the most appropriate ANTONYM of the word given in brackets to fill in the blank.
Uncle Joe is _____ (reputable) for spending 10 years of his youth in prison due to armed robbery.

- Ans
- 1. mournful
 - 2. anxious
 - 3. well-known
 - 4. notorious

Question ID : 264330152696
Option 1 ID : 264330598388
Option 2 ID : 264330598389
Option 3 ID : 264330598390
Option 4 ID : 264330598387
Status : Answered
Chosen Option : 4

Q.15 Parts of the following sentence have been given as options. Select the option that contains an error.
If you work hard, you secure good marks.

- Ans
- 1. good marks
 - 2. If you
 - 3. work hard
 - 4. you secure

Question ID : 264330152819
Option 1 ID : 264330598870
Option 2 ID : 264330598867
Option 3 ID : 264330598868
Option 4 ID : 264330598869
Status : Answered
Chosen Option : 4

Q.16 Select the option that can be used as a one-word substitute for the given group of words.

A person who is skilled in making maps

- Ans
- 1. Calligrapher
 - 2. Curator
 - 3. Cacographer
 - 4. Cartographer

Question ID : 264330153342
Option 1 ID : 264330600919
Option 2 ID : 264330600920
Option 3 ID : 264330600922
Option 4 ID : 264330600921
Status : Answered
Chosen Option : 4

Q.17 Select the option that can be used as a one-word substitute for the underlined group of words.

Sita loves her glass container in which she has many fish.

- Ans
- 1. aquarium
 - 2. cannister
 - 3. planetarium
 - 4. museum

Question ID : 264330153514
Option 1 ID : 264330601568
Option 2 ID : 264330601570
Option 3 ID : 264330601569
Option 4 ID : 264330601567
Status : Answered
Chosen Option : 1

Q.18 Select the most appropriate option that can rectify the underlined segment in the given sentence. If there is no need to rectify it, select 'no rectification needed'.

His claim to be the smartly kid in the school was a bit hyperbole!

- Ans
- 1. no rectification needed
 - 2. smartest
 - 3. smarter
 - 4. smart

Question ID : 264330153464
Option 1 ID : 264330601374
Option 2 ID : 264330601372
Option 3 ID : 264330601373
Option 4 ID : 264330601371
Status : Answered
Chosen Option : 2

Q.19 Select the option that can be used as a one-word substitute for the given group of words.

Easily set on fire

- Ans
- 1. Innocuous
 - 2. Ingrained
 - 3. Inflammable
 - 4. Inimical

Question ID : 264330151911
Option 1 ID : 264330595262
Option 2 ID : 264330595260
Option 3 ID : 264330595259
Option 4 ID : 264330595261
Status : Answered
Chosen Option : 3

Q.20 The following sentence has been split into four segments. Identify the segment that contains an error.
She has / bought / a car / two years ago.

- Ans**
- 1. She has
 - 2. bought
 - 3. two years ago
 - 4. a car

Question ID : 264330155321

Option 1 ID : 264330608723

Option 2 ID : 264330608724

Option 3 ID : 264330608726

Option 4 ID : 264330608725

Status : Answered

Chosen Option : 1

Comprehension:

In the following passage, some words have been deleted. Read the passage carefully and select the most appropriate option to fill in each blank.

Students put their heart and soul into studies while (1)_____ for examinations. They prepare the syllabus by giving many revisions, making important points on flash cards, preparing notes throughout the year. They read reference books in order to score good marks in the examination. This is the demanding (2)_____ of all the students who are appearing in the examinations. But, most students feel tensed on the day before an examination. Everyone is in a state of (3)_____ as to what questions would be asked in the paper and whether they could write their answers properly to get good marks. Such overthinking is the cause of (4)_____ which definitely affects their performance. They should revise the subject regularly and should not keep their doubts pending. This will not create a (5)_____ of backlog and they will get sufficient time to resolve their problem.

SubQuestion No : 21

Q.21 Select the most appropriate option to fill in blank number 1.

- Ans**
- 1. calculating
 - 2. guiding
 - 3. producing
 - 4. preparing

Question ID : 264330152914

Option 1 ID : 264330599235

Option 2 ID : 264330599238

Option 3 ID : 264330599237

Option 4 ID : 264330599236

Status : Answered

Chosen Option : 4

Comprehension:

In the following passage, some words have been deleted. Read the passage carefully and select the most appropriate option to fill in each blank.

Students put their heart and soul into studies while (1)_____ for examinations. They prepare the syllabus by giving many revisions, making important points on flash cards, preparing notes throughout the year. They read reference books in order to score good marks in the examination. This is the demanding (2)_____ of all the students who are appearing in the examinations. But, most students feel tensed on the day before an examination.

Everyone is in a state of (3)_____ as to what questions would be asked in the paper and whether they could write their answers properly to get good marks. Such overthinking is the cause of (4)_____ which definitely affects their performance. They should revise the subject regularly and should not keep their doubts pending. This will not create a (5)_____ of backlog and they will get sufficient time to resolve their problem.

SubQuestion No : 22

Q.22 Select the most appropriate option to fill in blank number 2.

Ans 1. principle

2. method

3. routine

4. habit

Question ID : 264330152915

Option 1 ID : 264330599242

Option 2 ID : 264330599239

Option 3 ID : 264330599241

Option 4 ID : 264330599240

Status : Answered

Chosen Option : 3

Comprehension:

In the following passage, some words have been deleted. Read the passage carefully and select the most appropriate option to fill in each blank.

Students put their heart and soul into studies while (1)_____ for examinations. They prepare the syllabus by giving many revisions, making important points on flash cards, preparing notes throughout the year. They read reference books in order to score good marks in the examination. This is the demanding (2)_____ of all the students who are appearing in the examinations. But, most students feel tensed on the day before an examination.

Everyone is in a state of (3)_____ as to what questions would be asked in the paper and whether they could write their answers properly to get good marks. Such overthinking is the cause of (4)_____ which definitely affects their performance. They should revise the subject regularly and should not keep their doubts pending. This will not create a (5)_____ of backlog and they will get sufficient time to resolve their problem.

SubQuestion No : 23

Q.23 Select the most appropriate option to fill in blank number 3.

Ans 1. confidence

2. hesitation

3. assurance

4. uncertainty

Question ID : 264330152916

Option 1 ID : 264330599244

Option 2 ID : 264330599245

Option 3 ID : 264330599246

Option 4 ID : 264330599243

Status : Answered

Chosen Option : 2

Comprehension:

In the following passage, some words have been deleted. Read the passage carefully and select the most appropriate option to fill in each blank.

Students put their heart and soul into studies while (1)_____ for examinations. They prepare the syllabus by giving many revisions, making important points on flash cards, preparing notes throughout the year. They read reference books in order to score good marks in the examination. This is the demanding (2)_____ of all the students who are appearing in the examinations. But, most students feel tensed on the day before an examination. Everyone is in a state of (3)_____ as to what questions would be asked in the paper and whether they could write their answers properly to get good marks. Such overthinking is the cause of (4)_____ which definitely affects their performance. They should revise the subject regularly and should not keep their doubts pending. This will not create a (5)_____ of backlog and they will get sufficient time to resolve their problem.

SubQuestion No : 24

Q.24 Select the most appropriate option to fill in blank number 4.

- Ans 1. anxiety
 2. agitation
 3. peace
 4. comfort

Question ID : 264330152917

Option 1 ID : 264330599248

Option 2 ID : 264330599250

Option 3 ID : 264330599247

Option 4 ID : 264330599249

Status : Answered

Chosen Option : 1

Comprehension:

In the following passage, some words have been deleted. Read the passage carefully and select the most appropriate option to fill in each blank.

Students put their heart and soul into studies while (1)_____ for examinations. They prepare the syllabus by giving many revisions, making important points on flash cards, preparing notes throughout the year. They read reference books in order to score good marks in the examination. This is the demanding (2)_____ of all the students who are appearing in the examinations. But, most students feel tensed on the day before an examination. Everyone is in a state of (3)_____ as to what questions would be asked in the paper and whether they could write their answers properly to get good marks. Such overthinking is the cause of (4)_____ which definitely affects their performance. They should revise the subject regularly and should not keep their doubts pending. This will not create a (5)_____ of backlog and they will get sufficient time to resolve their problem.

SubQuestion No : 25

Q.25 Select the most appropriate option to fill in blank number 5.

- Ans 1. burden
 2. mass
 3. weight
 4. power

Question ID : 264330152918

Option 1 ID : 264330599254

Option 2 ID : 264330599252

Option 3 ID : 264330599253

Option 4 ID : 264330599251

Status : Answered

Chosen Option : 1

SSC MTS 2023 Tier 1 Sept 14 Shift 3 Question Paper with Answers

Roll Number	
Candidate Name	
Exam Date	14/09/2023
Exam Time	4:00 PM - 6:00 PM
Subject	MTS Non Tech Havaladar CBIC and CBN Examination 2023

Section : Numerical and Mathematical Ability

Q.1 A square and a rhombus have the same base and the rhombus is inclined at 45° , then what will be the ratio of the area of the square to the area of the rhombus?

- Ans
- 1. $\sqrt{3}:1$
 - 2. $1:\sqrt{3}$
 - 3. $\sqrt{2}:\sqrt{3}$
 - 4. $\sqrt{2}:1$

Question ID : 264330154105

Option 1 ID : 264330603883

Option 2 ID : 264330603884

Option 3 ID : 264330603885

Option 4 ID : 264330603886

Status : Not Answered

Chosen Option : --

Q.2 If $A : B : C = 3 : 4 : 5$, then $\sqrt{A^2 + B^2} : \sqrt{C^2 - B^2}$ is:

- Ans
- 1. $3 : 2$
 - 2. $4 : 5$
 - 3. $5 : 3$
 - 4. $3 : 5$

Question ID : 264330154084

Option 1 ID : 264330603800

Option 2 ID : 264330603802

Option 3 ID : 264330603801

Option 4 ID : 264330603799

Status : Answered

Chosen Option : 3

Q.3 The ratio of two numbers is 3 : 4. If the sum of these two numbers is 70, then what is their LCM?

- Ans** 1. 120
 2. 96
 3. 108
 4. 84

Question ID : **264330155689**
Option 1 ID : **264330610162**
Option 2 ID : **264330610160**
Option 3 ID : **264330610161**
Option 4 ID : **264330610159**
Status : **Answered**
Chosen Option : 1

Q.4 What is the amount (in ₹) due on a sum of money ₹12,500 after one year if the compound interest is payable half-yearly at 12% per annum?

- Ans** 1. 14,450
 2. 14,540
 3. 15,440
 4. 14,045

Question ID : **264330153774**
Option 1 ID : **264330602559**
Option 2 ID : **264330602562**
Option 3 ID : **264330602560**
Option 4 ID : **264330602561**
Status : **Answered**
Chosen Option : 4

Q.5 A sum at simple interest of 5.5% per annum amounts to ₹7,503 in 4 years. Find the sum (in ₹).

- Ans** 1. 5,350
 2. 6,150
 3. 5,980
 4. 5,520

Question ID : **264330155745**
Option 1 ID : **264330610383**
Option 2 ID : **264330610386**
Option 3 ID : **264330610385**
Option 4 ID : **264330610384**
Status : **Not Answered**
Chosen Option : --

Q.6 In what ratio should rice worth ₹140 per kg and ₹90 per kg be mixed so that a mixture of two qualities of rice may become worth ₹110 per kg?

- Ans** 1. 2 : 3
 2. 1 : 3
 3. 3 : 2
 4. 1 : 2

Question ID : 264330154120
 Option 1 ID : 264330603944
 Option 2 ID : 264330603946
 Option 3 ID : 264330603943
 Option 4 ID : 264330603945
 Status : Answered
 Chosen Option : 1

Q.7 30 men can complete a work in 10 days. They started working and after six days, 10 more men joined them. In how many days will the total work be completed?

- Ans** 1. 8
 2. 9
 3. 6
 4. 7

Question ID : 264330156240
 Option 1 ID : 264330612361
 Option 2 ID : 264330612362
 Option 3 ID : 264330612359
 Option 4 ID : 264330612360
 Status : Answered
 Chosen Option : 2

Q.8 What is the value of the following expression?

$$\frac{[27 - (6 \div 3) \times 4] + 18}{84 - 8 \div 4 \times 8 - 2}$$

- Ans** 1. $\frac{37}{66}$
 2. $\frac{33}{7}$
 3. $\frac{29}{20}$
 4. $\frac{8}{9}$

Question ID : 264330156176
 Option 1 ID : 264330612106
 Option 2 ID : 264330612105
 Option 3 ID : 264330612104
 Option 4 ID : 264330612103
 Status : Answered
 Chosen Option : 1

Q.9 In what ratio should coffee powder costing ₹500 per kg be mixed with coffee powder costing ₹750 per kg so that the cost of the mixture is ₹600 per kg?

- Ans**
- 1. 5 : 2
 - 2. 4 : 3
 - 3. 3 : 2
 - 4. 3 : 1

Question ID : 264330155955
Option 1 ID : 264330611221
Option 2 ID : 264330611220
Option 3 ID : 264330611219
Option 4 ID : 264330611222
Status : Answered
Chosen Option : 3

Q.10 The salaries of P and Q together amount to ₹6,40,000. P and Q save 60% and 40%, respectively, of their individual salaries. If their expenditures are the same, then what is the ratio of P's salary to Q's salary?

- Ans**
- 1. 4 : 3
 - 2. 2 : 3
 - 3. 3 : 2
 - 4. 3 : 4

Question ID : 264330153762
Option 1 ID : 264330602514
Option 2 ID : 264330602512
Option 3 ID : 264330602511
Option 4 ID : 264330602513
Status : Not Answered
Chosen Option : --

Q.11 A 228 m long train is running at 125 km/h. In what time (in seconds), will it pass a man running at 17 km/h in the same direction in which the train is going?

- Ans**
- 1. 9.2
 - 2. 7.6
 - 3. 6.2
 - 4. 8.5

Question ID : 264330155754
Option 1 ID : 264330610419
Option 2 ID : 264330610421
Option 3 ID : 264330610422
Option 4 ID : 264330610420
Status : Answered
Chosen Option : 2

Q.12 Find the fourth proportional of 12^{35} , 3^{12} and 4^{12} .

- Ans
- 1. 12^{-23}
 - 2. 3^{24}
 - 3. 12^{-11}
 - 4. 4^{24}

Question ID : 264330154053

Option 1 ID : 264330603676

Option 2 ID : 264330603678

Option 3 ID : 264330603675

Option 4 ID : 264330603677

Status : Not Answered

Chosen Option : --

Q.13 Smita is faster than Pihu. Smita and Pihu each walk 48 km. The sum of their speeds is 14 km/hr, and the sum of times taken by them is 28 hours. What is Smita's speed?

- Ans
- 1. 12.5 km/hr
 - 2. 12 km/hr
 - 3. 8 km/hr
 - 4. 10 km/hr

Question ID : 264330156192

Option 1 ID : 264330612169

Option 2 ID : 264330612170

Option 3 ID : 264330612167

Option 4 ID : 264330612168

Status : Not Answered

Chosen Option : --

Q.14 Arin alone can do a piece of work in 6 days and Selvi alone can do the same in 8 days. Arin and Selvi undertook to do it for ₹7,200. With the help of Kevin, they completed the work in 3 days. How much is to be paid to Kevin?

- Ans
- 1. ₹900
 - 2. ₹700
 - 3. ₹800
 - 4. ₹600

Question ID : 264330156118

Option 1 ID : 264330611873

Option 2 ID : 264330611871

Option 3 ID : 264330611874

Option 4 ID : 264330611872

Status : Answered

Chosen Option : 1

Q.15 A man goes from his house to a vegetable market at the speed of 15 km/h and walked back at the speed of 10 km/h. If the whole journey took 2 hours 30 minutes, find the distance from his house to the vegetable market (in km).

- Ans**
- 1. 15
 - 2. 20
 - 3. 12
 - 4. 18

Question ID : 264330155992
Option 1 ID : 264330611367
Option 2 ID : 264330611370
Option 3 ID : 264330611368
Option 4 ID : 264330611369
Status : Not Answered
Chosen Option : --

Q.16 A closed wooden box measures externally 10 cm long, 8 cm broad and 6 cm high. If the thickness of the wood is 0.5 cm, then the volume of wood required is:

- Ans**
- 1. 165 cm^3
 - 2. 300 cm^3
 - 3. 230 cm^3
 - 4. 150 cm^3

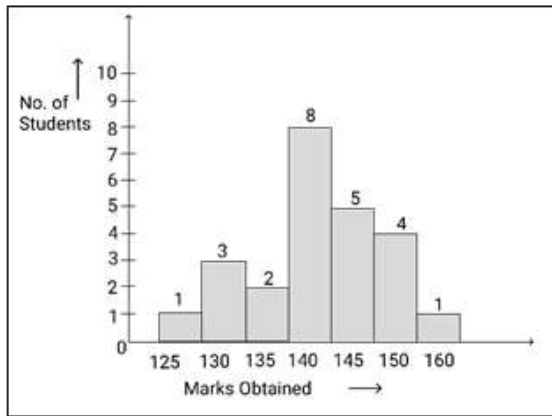
Question ID : 264330154107
Option 1 ID : 264330603893
Option 2 ID : 264330603892
Option 3 ID : 264330603894
Option 4 ID : 264330603891
Status : Not Answered
Chosen Option : --

Q.17 A factory owner earns 12% on the product manufactured by him. The shopkeeper earns 10% profit on the same item. If shopkeeper sells the product for ₹ 98.56, then the cost price of the product for the factory owner is ₹ ____.

- Ans**
- 1. 88
 - 2. 90
 - 3. 84
 - 4. 80

Question ID : 264330153804
Option 1 ID : 264330602679
Option 2 ID : 264330602680
Option 3 ID : 264330602681
Option 4 ID : 264330602682
Status : Answered
Chosen Option : 4

Q.18 Study the given graph and answer the question that follows.



How many students obtained more than 125 marks?

- Ans
- 1. 19
 - 2. 17
 - 3. 15
 - 4. 23

Question ID : 264330156242

Option 1 ID : 264330612369

Option 2 ID : 264330612368

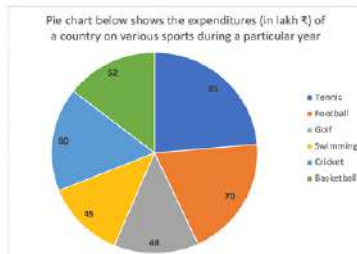
Option 3 ID : 264330612367

Option 4 ID : 264330612370

Status : Answered

Chosen Option : 4

Q.19 The Pie chart below shows the expenditures (in lakh ₹) of a country on various sports during a particular year. Study the graph carefully and answer the questions given below it.



The total expenditure on tennis, football and cricket taken together is what per cent (rounded off to 1 decimal place) more or less than the total expenditure on golf, swimming and basketball taken together?

- Ans
- 1. More, 29.6%
 - 2. less, 48.3%
 - 3. Less, 29.6%
 - 4. More, 48.3%

Question ID : 264330153785

Option 1 ID : 264330602605

Option 2 ID : 264330602604

Option 3 ID : 264330602606

Option 4 ID : 264330602603

Status : Not Answered

Chosen Option : --

Q.20

If a loss is $\frac{1}{8}$ th of the selling price, then the loss percentage is:

Ans

✓ 1. $11\frac{1}{9}\%$

✗ 2. $7\frac{4}{9}\%$

✗ 3. $10\frac{1}{9}\%$

✗ 4. $8\frac{5}{9}\%$

Question ID : 264330162069

Option 1 ID : 264330635605

Option 2 ID : 264330635606

Option 3 ID : 264330635603

Option 4 ID : 264330635604

Status : Not Answered

Chosen Option : --

Section : Reasoning Ability and Problem Solving

Q.1 Which figure should replace the question mark (?) if the following figure series were to be continued?

B	Y	6	6	Y	△	△	6	=	=	6	B	?
△		↑	↑		B	B		↑	↑		△	

Ans

✗ 1.

△	C	↑
B		=

✗ 2.

B	=	6
△		↑

✓ 3.

B	=	C
△		↑

✗ 4.

C	=	6
△		↑

Question ID : 264330154746

Option 1 ID : 264330606447

Option 2 ID : 264330606449

Option 3 ID : 264330606450

Option 4 ID : 264330606448

Status : Answered

Chosen Option : 2

Q.2 Select the combination of letters that when sequentially placed in the blanks of the given series, will complete the series.

W _ X _ XXW _ X _ _ X

Ans

✗ 1.

XWWWXW

✗ 2.

WWXWX

✓ 3.

XWXWX

✗ 4.

WXWXW

Question ID : 264330151655

Option 1 ID : 264330594247

Option 2 ID : 264330594248

Option 3 ID : 264330594249

Option 4 ID : 264330594250

Status : Answered

Chosen Option : 3

Q.3 What should come in place of '?' in the given series?

19 40 103 292 859 ?

- Ans
- 1. 2536
 - 2. 2560
 - 3. 2490
 - 4. 2508

Question ID : 264330151454
Option 1 ID : 264330593445
Option 2 ID : 264330593446
Option 3 ID : 264330593443
Option 4 ID : 264330593444
Status : Answered
Chosen Option : 2

Q.4 What should come in place of '?' in the given series?

18 41 110 ? 938 2801 8390

- Ans
- 1. 291
 - 2. 317
 - 3. 325
 - 4. 339

Question ID : 264330151488
Option 1 ID : 264330593579
Option 2 ID : 264330593580
Option 3 ID : 264330593581
Option 4 ID : 264330593582
Status : Answered
Chosen Option : 2

Q.5 14 is related to 57 following a certain logic. Following the same logic, 22 is related to 89. To which of the following is 52 related to, following the same logic?

- Ans
- 1. 209
 - 2. 208
 - 3. 206
 - 4. 204

Question ID : 264330151607
Option 1 ID : 264330594058
Option 2 ID : 264330594057
Option 3 ID : 264330594056
Option 4 ID : 264330594055
Status : Answered
Chosen Option : 1

Q.6 What should come in place of ? in the given series based on the English alphabetical order?

BSL, EUM, HWN, KYO, ?

- Ans**
- 1. MBP
 - 2. MBQ
 - 3. NBR
 - 4. NAP

Question ID : 264330155775

Option 1 ID : 264330610506

Option 2 ID : 264330610503

Option 3 ID : 264330610505

Option 4 ID : 264330610504

Status : Answered

Chosen Option : 4

Q.7 BNFT is related to FRJX in a certain way based on the English alphabetical order. In the same way, JOEA is related to NSIE. To which of the following is HERK related to, following the same logic?

- Ans**
- 1. LJVP
 - 2. JHVP
 - 3. LIVO
 - 4. KHUN

Question ID : 264330151679

Option 1 ID : 264330594343

Option 2 ID : 264330594345

Option 3 ID : 264330594346

Option 4 ID : 264330594344

Status : Answered

Chosen Option : 3

Q.8 Read the given statements and conclusions carefully. You have to take the given statements to be true even if they seem to be at variance from commonly known facts. You have to decide which conclusion/s logically follow/s from the given statements.

Statements: All buckets are plastic. Some plastic are spoons. All spoons are forks.

Conclusion I: Some plastic are buckets.

Conclusion II: Some plastics are forks.

- Ans**
- 1. Only conclusion (II) is follow.
 - 2. Both conclusions (I) and (II) are follow.
 - 3. Only conclusion (I) is follow.
 - 4. Neither conclusion (I) nor (II) is follow.

Question ID : 264330155928

Option 1 ID : 264330611116

Option 2 ID : 264330611118

Option 3 ID : 264330611115

Option 4 ID : 264330611117

Status : Answered

Chosen Option : 2

Q.9 What should come in place of '?' in the given series?

20 104 524 2624 13124 ?

- Ans
- 1. 65282
 - 2. 64586
 - 3. 65624
 - 4. 63457

Question ID : 264330151461
Option 1 ID : 264330593473
Option 2 ID : 264330593472
Option 3 ID : 264330593474
Option 4 ID : 264330593471
Status : Answered
Chosen Option : 3

Q.10 What should come in place of ? in the given series based on the English alphabetical order?

ZHS, YER, XBQ, WYP, ?

- Ans
- 1. VWO
 - 2. WVN
 - 3. WWN
 - 4. VVO

Question ID : 264330155789
Option 1 ID : 264330610561
Option 2 ID : 264330610559
Option 3 ID : 264330610562
Option 4 ID : 264330610560
Status : Answered
Chosen Option : 4

Q.11 Meena, Saroj, Goldy, Priti, Poonam and Baby are sitting around a circular table facing the centre.
Meena sits to the immediate left of Saroj, Goldy sits 3rd to the right of Saroj, Priti sits 2nd to the left of Goldy, Poonam sits to the immediate right of Goldy.
Who sits 2nd to the left of Baby?

- Ans
- 1. Saroj
 - 2. Goldy
 - 3. Priti
 - 4. Poonam

Question ID : 264330155649
Option 1 ID : 264330609999
Option 2 ID : 264330610001
Option 3 ID : 264330610000
Option 4 ID : 264330610002
Status : Answered
Chosen Option : 1

Q.12 5 is related to 20 following a certain logic. Following the same logic, 7 is related to 26. To which of the following is 2 related to, following the same logic?

- Ans**
- ✓ 1. 11
 - ✗ 2. 13
 - ✗ 3. 10
 - ✗ 4. 12

Question ID : 264330151581
Option 1 ID : 264330593952
Option 2 ID : 264330593954
Option 3 ID : 264330593951
Option 4 ID : 264330593953
Status : Not Answered
Chosen Option : --

Q.13 If 11th June 1987 is Thursday, then what will be the day of the week on 4th Dec 1989?

- Ans**
- ✗ 1. Tuesday
 - ✓ 2. Monday
 - ✗ 3. Saturday
 - ✗ 4. Wednesday

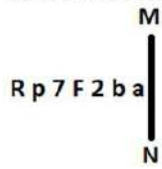
Question ID : 264330154332
Option 1 ID : 264330604792
Option 2 ID : 264330604793
Option 3 ID : 264330604791
Option 4 ID : 264330604794
Status : Answered
Chosen Option : 2

Q.14 In a certain code language, 'how are you' is coded as 'aj ts el' and 'show them how' is coded as 'wn el pd'. How is 'how' coded in the given language?

- Ans**
- ✗ 1. pd
 - ✓ 2. el
 - ✗ 3. aj
 - ✗ 4. wn

Question ID : 264330151711
Option 1 ID : 264330594471
Option 2 ID : 264330594473
Option 3 ID : 264330594472
Option 4 ID : 264330594474
Status : Answered
Chosen Option : 2

Q.15 Select the correct mirror image of the given figure when the mirror is placed at MN as shown below.



- Ans
- 1. a d 5 7 7 q R
 - 2. a d 5 7 7 q R
 - 3. a d 7 7 7 q R
 - 4. a d 5 7 7 d R

Question ID : 264330151520

Option 1 ID : 264330593710

Option 2 ID : 264330593708

Option 3 ID : 264330593707

Option 4 ID : 264330593709

Status : Answered

Chosen Option : 2

Q.16 What will come in the place of '?' in the following equation, if '+' and '-' are interchanged and 'x' and '/' are interchanged?
 $37 - 18 \div 6 + 325 \times 25 = ?$

- Ans
- 1. 132
 - 2. 152
 - 3. 142
 - 4. 122

Question ID : 264330155673

Option 1 ID : 264330610098

Option 2 ID : 264330610095

Option 3 ID : 264330610097

Option 4 ID : 264330610096

Status : Answered

Chosen Option : 1

Q.17 What will come in place of '?' in the following equation, if '-' and 'x' are interchanged and '+' and '/' are interchanged?

$$7 + 7 \times 3 - 4 + 5 = ?$$

- Ans
- 1. -1
 - 2. -6
 - 3. -2
 - 4. -4

Question ID : 264330154659

Option 1 ID : 264330606102

Option 2 ID : 264330606100

Option 3 ID : 264330606101

Option 4 ID : 264330606099

Status : Answered

Chosen Option : 2

Q.18 Read the given statement(s) and conclusions carefully. Assuming that the information given in the statements is true, even if it appears to be at variance with commonly known facts, decide which of the given conclusions logically follow(s) from the statement(s).

Statements: All the trucks are flies. Some scooters are flies.

Conclusions:

(I) All trucks are scooters.

(II) Some scooters are trucks.

- Ans**
- 1. Neither conclusion (I) nor (II) is follows.
 - 2. Only conclusion (I) is follows.
 - 3. Both conclusions (I) and (II) are follows.
 - 4. Only conclusion (II) is follows.

Question ID : 264330154429

Option 1 ID : 264330605181

Option 2 ID : 264330605179

Option 3 ID : 264330605182

Option 4 ID : 264330605180

Status : Answered

Chosen Option : 1

Q.19 In a certain code language, 'FLOWERY' is coded as 'FYREWOL' and 'LINGUIST' is coded as 'LTSIUGNI'. What is the code for 'MANIFEST' in the given code language?

- Ans**
- 1. MTSEFINA
 - 2. TESFINAM
 - 3. SEFINAMT
 - 4. MSTEGJMA

Question ID : 264330155814

Option 1 ID : 264330610661

Option 2 ID : 264330610659

Option 3 ID : 264330610660

Option 4 ID : 264330610662

Status : Answered

Chosen Option : 1

Q.20 Select the option figure in which the given figure (X) is embedded as its part (rotation is NOT allowed).



(X)

Ans

✗ 1.



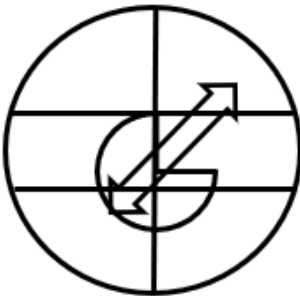
✗ 2.



✓ 3.



✗ 4.



Question ID : 264330151729

Option 1 ID : 264330594546

Option 2 ID : 264330594545

Option 3 ID : 264330594544

Option 4 ID : 264330594543

Status : Answered

Chosen Option : 3

Q.1 Which of the following Indian playback singers received the Bharat Ratna in 2001?

- Ans 1. KS Chithra
 2. Geeta Dutt
 3. Lata Mangeshkar
 4. Asha Bhosle

Question ID : 264330161773
Option 1 ID : 264330634422
Option 2 ID : 264330634421
Option 3 ID : 264330634420
Option 4 ID : 264330634419
Status : Answered
Chosen Option : 4

Q.2 Which of the following cricket players wrote the autobiography 'Playing It My Way'?

- Ans 1. Yuvraj Singh
 2. Sourav Ganguly
 3. Sachin Tendulkar
 4. Kiran More

Question ID : 264330160960
Option 1 ID : 264330631173
Option 2 ID : 264330631172
Option 3 ID : 264330631171
Option 4 ID : 264330631174
Status : Answered
Chosen Option : 1

Q.3 In which city is the India Gate situated?

- Ans 1. Delhi
 2. Ahmedabad
 3. Lucknow
 4. Mumbai

Question ID : 264330160775
Option 1 ID : 264330630431
Option 2 ID : 264330630433
Option 3 ID : 264330630434
Option 4 ID : 264330630432
Status : Answered
Chosen Option : 1

Q.4 Who authored the book 'Poverty and Un-British Rule in India' in 1901, which was highly critical of the economic impact of British Rule?

- Ans 1. Pherozeshah Mehta
 2. Dadabhai Naoroji
 3. WC Bonnerji
 4. Badruddin Tyabji

Question ID : 264330161748
Option 1 ID : 264330634319
Option 2 ID : 264330634322
Option 3 ID : 264330634320
Option 4 ID : 264330634321
Status : Answered
Chosen Option : 2

Q.5 The efforts of Malayalam poet Vallathol Narayana Menon and dancer and guru Kalyanikutty Amma brought back and gave a new life to the dance form

- Ans**
- 1. Bharatanatyam
 - 2. Kuchipudi
 - 3. Mohiniyattam
 - 4. Kathakali

Question ID : 264330160790
Option 1 ID : 264330630492
Option 2 ID : 264330630493
Option 3 ID : 264330630494
Option 4 ID : 264330630491
Status : Not Answered
Chosen Option : --

Q.6 Where was All Indian Muslim League formed in 1906?

- Ans**
- 1. Agra
 - 2. Dhaka
 - 3. Lahore
 - 4. Delhi

Question ID : 264330162333
Option 1 ID : 264330636661
Option 2 ID : 264330636660
Option 3 ID : 264330636659
Option 4 ID : 264330636662
Status : Answered
Chosen Option : 3

Q.7 Which of the following writers wrote the autobiography 'Truth, Love and a Little Malice'?

- Ans**
- 1. Khushwant Singh
 - 2. Chetan Bhagat
 - 3. Pratibha Ray
 - 4. Amrita Pritam

Question ID : 264330160962
Option 1 ID : 264330631180
Option 2 ID : 264330631182
Option 3 ID : 264330631181
Option 4 ID : 264330631179
Status : Answered
Chosen Option : 2

Q.8 In 2023, a three-day All-India Taekwondo Championship was organized in _____ to mark 50 years of Korea-India diplomatic relations.

- Ans
- 1. Kolkata
 - 2. Bengaluru
 - 3. Mizoram
 - 4. New Delhi

Question ID : 264330161154
Option 1 ID : 264330631949
Option 2 ID : 264330631947
Option 3 ID : 264330631950
Option 4 ID : 264330631948
Status : Not Answered
Chosen Option : --

Q.9 The outward remittances under the Reserve Bank of India's _____ made a strong comeback in the first quarter of FY23 as Indians increased spending on international travel, maintenance of close relatives and gifts.

- Ans
- 1. Liberalised Remittance Scheme
 - 2. Regular Remittance Scheme
 - 3. Liquid Remittances Scheme
 - 4. Foreign Remittances Scheme

Question ID : 264330161403
Option 1 ID : 264330632939
Option 2 ID : 264330632940
Option 3 ID : 264330632941
Option 4 ID : 264330632942
Status : Not Answered
Chosen Option : --

Q.10 The Pradhan Mantri MUDRA Yojana (PMMY) scheme provide loans up to _____ to the non-corporate, non-farm small and micro entrepreneurs. (As of April 2023).

- Ans
- 1. 5 lakh
 - 2. 10 lakh
 - 3. 2.5 lakh
 - 4. 1 lakh

Question ID : 264330161578
Option 1 ID : 264330633641
Option 2 ID : 264330633642
Option 3 ID : 264330633640
Option 4 ID : 264330633639
Status : Answered
Chosen Option : 4

Q.11 What is the primary cause for the highest precipitation in India?

- Ans
- 1. West Garo Hills
 - 2. South-West Monsoon
 - 3. North-East Monsoon
 - 4. East Khasi Hills

Question ID : 264330157824
Option 1 ID : 264330618658
Option 2 ID : 264330618657
Option 3 ID : 264330618656
Option 4 ID : 264330618655
Status : Answered
Chosen Option : 2

Q.12 The _____ maestros who revived the art form in the late 1940s include Kelucharan Mohapatra and Raghunath Dutta.

- Ans
- 1. Sattriya
 - 2. Odissi
 - 3. Manipuri
 - 4. Chhau

Question ID : 264330160813
Option 1 ID : 264330630584
Option 2 ID : 264330630585
Option 3 ID : 264330630583
Option 4 ID : 264330630586
Status : Not Answered
Chosen Option : --

Q.13 The Guru Kelucharan Mohapatra Award 2022 was conferred upon Guru Niranjan Rout and Guru Ramahari Das for their contribution to the fields of _____ dance and music.

- Ans
- 1. Sattriya
 - 2. Kuchipudi
 - 3. Kathak
 - 4. Odissi

Question ID : 264330155484
Option 1 ID : 264330609339
Option 2 ID : 264330609341
Option 3 ID : 264330609342
Option 4 ID : 264330609340
Status : Not Answered
Chosen Option : --

Q.14 Which of the following is true about disposable income in relation to personal income?

- Ans 1. Disposable income is equal to personal income.
2. Disposable income is always less than personal income.
3. Disposable income is always greater than personal income.
4. Disposable income can be greater or less than personal income, depending on taxes and deductions.

Question ID : 264330161589
Option 1 ID : 264330633685
Option 2 ID : 264330633684
Option 3 ID : 264330633683
Option 4 ID : 264330633686
Status : Not Answered
Chosen Option : --

Q.15 Which of the following best describes the process of calorimetry?

- Ans 1. Measuring the amount of compressive strength
2. Measuring the amount of force
3. Measuring the amount of electricity
4. Measuring the amount of heat energy transferred

Question ID : 264330161330
Option 1 ID : 264330632649
Option 2 ID : 264330632647
Option 3 ID : 264330632648
Option 4 ID : 264330632650
Status : Not Answered
Chosen Option : --

Q.16 Which Article of the Constitution of India provides early childhood care and education for all children until they complete the age of six years?

- Ans 1. Article 38
2. Article 39
3. Article 45
4. Article 40

Question ID : 264330159906
Option 1 ID : 264330626974
Option 2 ID : 264330626973
Option 3 ID : 264330626971
Option 4 ID : 264330626972
Status : Not Answered
Chosen Option : --

Q.17 Which of the following is NOT a constitutional body?

- Ans 1. Election Commission
2. Finance Commission
3. Union Public Service Commission
4. NITI Aayog

Question ID : 264330160861
Option 1 ID : 264330630776
Option 2 ID : 264330630778
Option 3 ID : 264330630777
Option 4 ID : 264330630775
Status : Answered
Chosen Option : 3

Q.18 विटामिन B1 की कमी से कौन-सा पोषण संबंधी विकार होता है जिससे परिधीय तंत्रिकाओं (peripheral nerves) और क्षय (wasting) की समस्याएं उत्पन्न होती हैं?

- Ans
- 1. शुष्काक्षिपाक (Xerophthalmia)
 - 2. पर्निसियस एनीमिया (Pernicious anaemia)
 - 3. बेरीबेरी (Beriberi)
 - 4. सूखा रोग (Rickets)

Question ID : 264330161075

Option 1 ID : 264330631634

Option 2 ID : 264330631631

Option 3 ID : 264330631633

Option 4 ID : 264330631632

Status : Not Answered

Chosen Option : --

Q.19 According to the National Multidimensional Poverty Index of NITI Aayog 2021, which of the following states has less than 1% multidimensionally Poor of its total population?

- Ans
- 1. Maharashtra
 - 2. Punjab
 - 3. Telangana
 - 4. Kerala

Question ID : 264330161569

Option 1 ID : 264330633606

Option 2 ID : 264330633604

Option 3 ID : 264330633605

Option 4 ID : 264330633603

Status : Not Answered

Chosen Option : --

Q.20 According to the Hindu calendar, Holi is celebrated on _____.

- Ans
- 1. Chaitra Purnima
 - 2. Pausa Purnima
 - 3. Phalguna Purnima
 - 4. Magha Purnima

Question ID : 264330160827

Option 1 ID : 264330630641

Option 2 ID : 264330630642

Option 3 ID : 264330630639

Option 4 ID : 264330630640

Status : Answered

Chosen Option : 3

Q.21 Who was the music director of the famous song "Aye Mere Watan Ke Logon" sung by Lata Mangeshkar?

- Ans
- 1. Kishore Kumar
 - 2. Rajesh Roshan
 - 3. C Ramchandra
 - 4. Anand Raaj Anand

Question ID : 264330155514
Option 1 ID : 264330609462
Option 2 ID : 264330609459
Option 3 ID : 264330609461
Option 4 ID : 264330609460
Status : Answered
Chosen Option : 4

Q.22 भारत में जंगली गधे और ऊंट किस प्रकार के वनों में पाए जाते हैं?

- Ans
- 1. उष्णकटिबंधीय सदाबहार वन
 - 2. पर्वतीय वन
 - 3. कांटेदार वन और झाड़ियां
 - 4. मैंग्रोव वन

Question ID : 264330161499
Option 1 ID : 264330633325
Option 2 ID : 264330633326
Option 3 ID : 264330633324
Option 4 ID : 264330633323
Status : Answered
Chosen Option : 3

Q.23 Which Indian sprinter bagged two gold medals, one each in the men's 100 and 200-metre races at the Flanders Cup 2023 athletics meet?

- Ans
- 1. Mohammed Afsal P
 - 2. Amlan Borgohain
 - 3. Tejas Shirse
 - 4. ihson dhanson

Question ID : 264330161132
Option 1 ID : 264330631859
Option 2 ID : 264330631860
Option 3 ID : 264330631862
Option 4 ID : 264330631861
Status : Not Answered
Chosen Option : --

Q.24 Who became the first Indian javelin ace to win the gold at the Zurich Diamond League?

- Ans
- 1. Sahil Silwal
 - 2. Shivpal Yadav
 - 3. Neeraj Chopra
 - 4. Rohit Yadav

Question ID : 264330158363
Option 1 ID : 264330620813
Option 2 ID : 264330620811
Option 3 ID : 264330620812
Option 4 ID : 264330620814
Status : Answered
Chosen Option : 3

Q.25 Which curve examines the relationship between the rate of unemployment and the rate of money wage changes?

- Ans** 1. Phillips curve
 2. Indifference curve
 3. Supply curve
 4. Demand curve

Question ID : 264330161456
Option 1 ID : 264330633152
Option 2 ID : 264330633151
Option 3 ID : 264330633154
Option 4 ID : 264330633153
Status : Answered
Chosen Option : 1

Section : English Language and Comprehension

Q.1 The following sentence has been split into four segments. Identify the segment that contains a grammatical error.
When I was in high school / I participated in several extracurricular activities / such as the debate team and the school newspaper / which help me developed my communication and writing skills.

- Ans** 1. When I was in high school
 2. which help me developed my communication and writing skills
 3. such as the debate team and the school newspaper
 4. I participated in several extracurricular activities

Question ID : 264330144180
Option 1 ID : 264330564983
Option 2 ID : 264330564986
Option 3 ID : 264330564985
Option 4 ID : 264330564984
Status : Answered
Chosen Option : 2

Q.2 Select the most appropriate option that can substitute the underlined segment in the given sentence.
The rise in temperature is playing havoc with India's rainfall which is pertinent for India's agriculture sector.

- Ans** 1. rainfall who is pertinent
 2. rainfall which is significant
 3. rainfall which is decant
 4. rainfall which was mendicant

Question ID : 264330151807
Option 1 ID : 264330594855
Option 2 ID : 264330594857
Option 3 ID : 264330594858
Option 4 ID : 264330594856
Status : Answered
Chosen Option : 2

Q.3 Select the most appropriate idiom to fill in the blank.
Sameera has been in _____ since she got selected for a highly paid job at a multinational company.

- Ans
- 1. seventh heaven
 - 2. all the rage
 - 3. the dark
 - 4. a cold day in uly

Question ID : 264330152780
Option 1 ID : 264330598714
Option 2 ID : 264330598713
Option 3 ID : 264330598712
Option 4 ID : 264330598711
Status : Answered
Chosen Option : 1

Q.4 Select the most appropriate meaning of the underlined segment in the given sentence.
I hope you break a leg at your performance tonight!

- Ans
- 1. Give up
 - 2. Make a mistake
 - 3. Perform well
 - 4. Hurt yourself

Question ID : 264330152925
Option 1 ID : 264330599281
Option 2 ID : 264330599282
Option 3 ID : 264330599280
Option 4 ID : 264330599279
Status : Answered
Chosen Option : 3

Q.5 Select the most appropriate option to fill in the blank.
Winning the championship was a dream come true for the team, but being awarded the MVP trophy was _____.

- Ans
- 1. the silver lining
 - 2. the bird in the bush
 - 3. a cold turkey
 - 4. the icing on the cake

Question ID : 264330151886
Option 1 ID : 264330595166
Option 2 ID : 264330595164
Option 3 ID : 264330595163
Option 4 ID : 264330595165
Status : Answered
Chosen Option : 4

Q.6 Select the most appropriate **ANTONYM** of the underlined word.
We requested grandmother to extend her visit.

- Ans 1. Imperil
 2. Curtail
 3. Assail
 4. Bewail

Question ID : 264330151820
Option 1 ID : 264330594910
Option 2 ID : 264330594907
Option 3 ID : 264330594909
Option 4 ID : 264330594908
Status : Answered
Chosen Option : 2

Q.7 Select the most appropriate option that can substitute the underlined segment in the given sentence.
Simon is afraid of closed space.

- Ans 1. has xenophobia
 2. has ecophobia
 3. has claustrophobia
 4. has hydrophobia

Question ID : 264330153512
Option 1 ID : 264330601560
Option 2 ID : 264330601559
Option 3 ID : 264330601561
Option 4 ID : 264330601562
Status : Answered
Chosen Option : 3

Q.8 Select the most appropriate synonym of the given word.
Magnificent

- Ans 1. Justify
 2. Glorious
 3. Highest
 4. Modest

Question ID : 264330152595
Option 1 ID : 264330597984
Option 2 ID : 264330597986
Option 3 ID : 264330597985
Option 4 ID : 264330597983
Status : Answered
Chosen Option : 2

Q.9 The sentence given below contains some spelling errors. Select the option that has the correct spellings.

Applications of subjects like Physiks and chemmistry in our dayly life also have higher visibilty than those of Biology.

- Ans
- 1. Applicasons of subjects like Physiks and Cemistry in our dayly life also have higher visibility than those of Biology.
 - 2. Applications of subjects like Physics and chemistry in our dayly life also have higher visibilty than those of Biology.
 - 3. Applications of subjects like Physics and Chemistry in our daily life also have higher visibility than those of Biology.
 - 4. Applicacions of subjects like Physics and chemmistry in our daily life also have higher visibilty than those of Biology.

Question ID : 264330153542

Option 1 ID : 264330601674

Option 2 ID : 264330601672

Option 3 ID : 264330601671

Option 4 ID : 264330601673

Status : Answered

Chosen Option : 3

Q.10 Parts of the given sentence have been underlined. One of them contains an error. The underlined parts are given as options with some changes. Select the option that correctly rectifies the error.

The weather is cold tonight than it was yesterday.

- Ans
- 1. its
 - 2. are
 - 3. were
 - 4. colder

Question ID : 264330153175

Option 1 ID : 264330600261

Option 2 ID : 264330600259

Option 3 ID : 264330600262

Option 4 ID : 264330600260

Status : Answered

Chosen Option : 4

Q.11 Select the option that correctly rectifies the underlined spelling error in the given sentence.

Little children are afraid to go to school because of the agressive seniors who tend to bully them.

- Ans
- 1. Aggresive
 - 2. Aggressive
 - 3. Agrressive
 - 4. Agrressive

Question ID : 264330155315

Option 1 ID : 264330608699

Option 2 ID : 264330608700

Option 3 ID : 264330608702

Option 4 ID : 264330608701

Status : Answered

Chosen Option : 2

Q.12 Select the most appropriate option to fill in the blank.
The scratches on her hands were clear signs of domestic violence, _____ and said that she got scratched by barbed wire fencing.

- Ans
- 1. and poverty
 - 2. yet she lied
 - 3. which was enough evidence
 - 4. done a while ago

Question ID : 264330152640
Option 1 ID : 264330598165
Option 2 ID : 264330598164
Option 3 ID : 264330598166
Option 4 ID : 264330598163
Status : Answered
Chosen Option : 2

Q.13 Select the most appropriate option that can substitute the underlined segment in the given sentence.
Rahul's sister says that my brother is the best dancer in the city.

- Ans
- 1. her brother is the best dancer in the city
 - 2. my brother was the best dancer in the city
 - 3. her brother was the best dancer in the city
 - 4. his brother was the best dancer in the city

Question ID : 264330152709
Option 1 ID : 264330598437
Option 2 ID : 264330598435
Option 3 ID : 264330598436
Option 4 ID : 264330598438
Status : Answered
Chosen Option : 1

Q.14 Select the most appropriate option that can substitute the underlined segment in the given sentence. If there is no need to substitute it, select 'No improvement required'.
A wonder in the plant kingdom, the Great Banyan Tree of the AJC Bose Botanical Garden at Shibpur in Howrah, occupies a unique position in the world records.

- Ans
- 1. occupying a unique position in
 - 2. occupies an unique position in
 - 3. No improvement required
 - 4. being occupied a unique position of

Question ID : 264330152667
Option 1 ID : 264330598271
Option 2 ID : 264330598273
Option 3 ID : 264330598274
Option 4 ID : 264330598272
Status : Answered
Chosen Option : 3

Q.15 Parts of the following sentence have been given as options. Select the option that contains an error.
The cholera is a frightful disease.

- Ans 1. is
 2. The cholera
 3. frightful disease
 4. a

Question ID : 264330152791
Option 1 ID : 264330598756
Option 2 ID : 264330598755
Option 3 ID : 264330598758
Option 4 ID : 264330598757
Status : Answered
Chosen Option : 2

Q.16 The sentence given below has spelling errors. Select the sentence without spelling errors.
Knowledge and awareness about my own self has to preceede my knowledge of things other than me.

- Ans 1. Knowledge and awareness about my own self has to preceede my knowledge of things other then me.
 2. Knowledge and awareness about my own self has to precede my knowledge of things other than me.
 3. Knowlegde and awareness about my own self has to preceede my knowlegde of things other than me.
 4. Knowledge and awarenes about my own self has to preceede my knowledge of things other than me.

Question ID : 264330151838
Option 1 ID : 264330594982
Option 2 ID : 264330594981
Option 3 ID : 264330594979
Option 4 ID : 264330594980
Status : Answered
Chosen Option : 2

Q.17 Select the most appropriate idiom to fill in the blank.
If Peter said he would get that book for you, he will do it. He always _____.

- Ans 1. keeps under his hat
 2. keeps him at arm's length
 3. keeps his word
 4. keeps his shirt on

Question ID : 264330153101
Option 1 ID : 264330599967
Option 2 ID : 264330599969
Option 3 ID : 264330599968
Option 4 ID : 264330599970
Status : Answered
Chosen Option : 3

Q.18 Select the most appropriate option that can substitute the underlined segment in the given sentence.

It has raining very hard and he has a very large umbrella to keep off the rain-drops.

- Ans
- 1. shall rain
 - 2. is raining
 - 3. will be rainy
 - 4. rained

Question ID : 264330153481
Option 1 ID : 264330601441
Option 2 ID : 264330601439
Option 3 ID : 264330601442
Option 4 ID : 264330601440
Status : Answered
Chosen Option : 2

Q.19 Select the most appropriate synonym of the underlined word in the given sentence.
Shiya had more grit than her other siblings.

- Ans
- 1. power
 - 2. level
 - 3. gap
 - 4. courage

Question ID : 264330152722
Option 1 ID : 264330598487
Option 2 ID : 264330598490
Option 3 ID : 264330598488
Option 4 ID : 264330598489
Status : Answered
Chosen Option : 4

Q.20 The following sentence has been divided into four parts. Identify the part that contains an error.

(A) The twins are / (B) often told that / (C) they are resembling / (D) each other.

- Ans
- 1. C
 - 2. A
 - 3. B
 - 4. D

Question ID : 264330152613
Option 1 ID : 264330598056
Option 2 ID : 264330598055
Option 3 ID : 264330598058
Option 4 ID : 264330598057
Status : Answered
Chosen Option : 3

Comprehension:

In the following passage some words have been deleted. Fill in the blanks with the help of the alternatives given. Select the most appropriate option for each number.

Each essay is set (1)_____ against its background and made simpler by providing (2)_____ summary and critical commentary, short notes on textual issues, and (3)_____ of important critical and theoretical issues under the heading essay topics. (4)_____ of the most commonly used terms in the literature is given at the end and meant to serve as ready reference. This book will cater the (5)_____ of students of literature and teachers teaching this course.

SubQuestion No : 21

Q.21 Select the most appropriate option to fill in blank number 1.

- Ans 1. in
 2. at
 3. on
 4. off

Question ID : 264330153584

Option 1 ID : 264330601830

Option 2 ID : 264330601828

Option 3 ID : 264330601827

Option 4 ID : 264330601829

Status : Answered

Chosen Option : 4

Comprehension:

In the following passage some words have been deleted. Fill in the blanks with the help of the alternatives given. Select the most appropriate option for each number.

Each essay is set (1)_____ against its background and made simpler by providing (2)_____ summary and critical commentary, short notes on textual issues, and (3)_____ of important critical and theoretical issues under the heading essay topics. (4)_____ of the most commonly used terms in the literature is given at the end and meant to serve as ready reference. This book will cater the (5)_____ of students of literature and teachers teaching this course.

SubQuestion No : 22

Q.22 Select the most appropriate option to fill in blank number 2.

- Ans 1. there
 2. its
 3. that
 4. this

Question ID : 264330153585

Option 1 ID : 264330601834

Option 2 ID : 264330601833

Option 3 ID : 264330601832

Option 4 ID : 264330601831

Status : Answered

Chosen Option : 2

Comprehension:

In the following passage some words have been deleted. Fill in the blanks with the help of the alternatives given. Select the most appropriate option for each number.

Each essay is set (1)_____ against its background and made simpler by providing (2)_____ summary and critical commentary, short notes on textual issues, and (3)_____ of important critical and theoretical issues under the heading essay topics. (4)_____ of the most commonly used terms in the literature is given at the end and meant to serve as ready reference. This book will cater the (5)_____ of students of literature and teachers teaching this course.

SubQuestion No : 23

Q.23 Select the most appropriate option to fill in blank number 3.

- Ans 1. mindset
 2. chats
 3. discussions
 4. thinking

Question ID : 264330153586

Option 1 ID : 264330601838

Option 2 ID : 264330601835

Option 3 ID : 264330601836

Option 4 ID : 264330601837

Status : Answered

Chosen Option : 3

Comprehension:

In the following passage some words have been deleted. Fill in the blanks with the help of the alternatives given. Select the most appropriate option for each number.

Each essay is set (1)_____ against its background and made simpler by providing (2)_____ summary and critical commentary, short notes on textual issues, and (3)_____ of important critical and theoretical issues under the heading essay topics. (4)_____ of the most commonly used terms in the literature is given at the end and meant to serve as ready reference. This book will cater the (5)_____ of students of literature and teachers teaching this course.

SubQuestion No : 24

Q.24 Select the most appropriate option to fill in blank number 4.

- Ans 1. figures
 2. glossary
 3. grammar
 4. data

Question ID : 264330153587

Option 1 ID : 264330601841

Option 2 ID : 264330601839

Option 3 ID : 264330601840

Option 4 ID : 264330601842

Status : Answered

Chosen Option : 2

Comprehension:

In the following passage some words have been deleted. Fill in the blanks with the help of the alternatives given. Select the most appropriate option for each number.

Each essay is set (1)_____ against its background and made simpler by providing (2)_____ summary and critical commentary, short notes on textual issues, and (3)_____ of important critical and theoretical issues under the heading essay topics. (4)_____ of the most commonly used terms in the literature is given at the end and meant to serve as ready reference. This book will cater the (5)_____ of students of literature and teachers teaching this course.

SubQuestion No : 25

Q.25 Select the most appropriate option to fill in blank number 5.

- Ans 1. desires
 2. whims
 3. feelings
 4. needs

Question ID : **264330153588**

Option 1 ID : **264330601846**

Option 2 ID : **264330601845**

Option 3 ID : **264330601843**

Option 4 ID : **264330601844**

Status : **Answered**

Chosen Option : **4**