

SSC MTS 2023 Tier 1 Sept 1 Shift 1 Question Paper with Answers

Roll Number	
Candidate Name	
Venue Name	iON Digital Zone iDZ Thondamuthur
Exam Date	01/09/2023
Exam Time	9:00 AM - 11:00 AM
Subject	MTS Non Tech Havaladar CBIC and CBN Examination 2023

Section : Numerical and Mathematical Ability

Q.1 If the first number is 20% less than the third number and the ratio of the second to the third number is 7 : 10, then the average of the first and the third number is how much per cent more than the second number?

- Ans**
1. $26\frac{4}{7}$
2. $28\frac{2}{7}$
3. $28\frac{4}{7}$
4. $24\frac{2}{7}$

Question ID : 264330155958

Option 1 ID : 264330611234

Option 2 ID : 264330611232

Option 3 ID : 264330611231

Option 4 ID : 264330611233

Status : Answered

Chosen Option : 3

Q.2 Geeta deposited a certain sum of money in her bank account which amounted to ₹27,783 in 3 years at 5% per annum, the interest being compounded annually. What amount did she deposit?

- Ans**
1. ₹25,500
2. ₹25,000
3. ₹26,000
4. ₹24,000

Question ID : 264330154129

Option 1 ID : 264330603980

Option 2 ID : 264330603981

Option 3 ID : 264330603979

Option 4 ID : 264330603982

Status : Answered

Chosen Option : 4

Q.3 A truck driver drove 60 km/h for three hours. Then he stopped for one hour and did not go anywhere. Then, he drove four more hours at 60 km/h. What was the driver's average speed (in km/h)?

- Ans**
- ✓ 1. 52.5
 - ✗ 2. 62.4
 - ✗ 3. 50.5
 - ✗ 4. 42.8

Question ID : 264330156099

Option 1 ID : 264330611796

Option 2 ID : 264330611798

Option 3 ID : 264330611795

Option 4 ID : 264330611797

Status : Answered

Chosen Option : 1

Q.4 The following table indicates the number of candidates who appeared in an entrance examination from four different cities A, B, C, D and the ratio of passing and failing. Study the table carefully and answer the question.

City	No. of candidates appeared	Ratio of passing and failing
A	660	5 : 6
B	650	2 : 3
C	500	3 : 2
D	630	4 : 5

Which city has the highest number of candidates who failed in the entrance examination and find its rate of per cent in that city, respectively?

- Ans**
- ✗ 1. A, 50%
 - ✓ 2. B, 60%
 - ✗ 3. D, 60%
 - ✗ 4. C, 50%

Question ID : 264330156014

Option 1 ID : 264330611456

Option 2 ID : 264330611457

Option 3 ID : 264330611455

Option 4 ID : 264330611458

Status : Answered

Chosen Option : 2

Q.5 Disha invested an amount of ₹20,000 for 9 years at a simple interest per annum and obtain the total amount of ₹33,500. What is the rate of interest?

- Ans**
- ✗ 1. 8%
 - ✗ 2. 8.5%
 - ✓ 3. 7.5%
 - ✗ 4. 9%

Question ID : 264330156188

Option 1 ID : 264330612154

Option 2 ID : 264330612153

Option 3 ID : 264330612152

Option 4 ID : 264330612151

Status : Answered

Chosen Option : 3

Q.6 Simplify:

$$(13 \div 13 \text{ of } 13 + 13) / (13 \div 13 \times 13 + 13)$$

- Ans
- 1. $\frac{1}{26}$
 - 2. $\frac{15}{26}$
 - 3. $\frac{13}{96}$
 - 4. $\frac{85}{169}$

Question ID : 264330156088

Option 1 ID : 264330611751

Option 2 ID : 264330611752

Option 3 ID : 264330611754

Option 4 ID : 264330611753

Status : Answered

Chosen Option : 4

Q.7 The cost price of an item is ₹4,350. What is the profit percentage (rounded off to 1 decimal place) if it is sold at ₹5,680?

- Ans
- 1. 28.5%
 - 2. 40.7%
 - 3. 36.8%
 - 4. 30.6%

Question ID : 264330156475

Option 1 ID : 264330613290

Option 2 ID : 264330613287

Option 3 ID : 264330613288

Option 4 ID : 264330613289

Status : Answered

Chosen Option : 4

Q.8 In a class of 37 students, there are 22 girls. The average weight of these girls is 46 kg and the average weight of the whole class is 50 kg. What is the average weight (in kg) of the boys in that class? (Rounded off to 2 decimal places)

- Ans
- 1. 60.74
 - 2. 55.87
 - 3. 61.35
 - 4. 58.25

Question ID : 264330155728

Option 1 ID : 264330610317

Option 2 ID : 264330610315

Option 3 ID : 264330610318

Option 4 ID : 264330610316

Status : Answered

Chosen Option : 2

Q.9 A boat takes 20 hours for travelling downstream from point A to point B and comes back to a midpoint C between A and B. The speed of the stream is 5 km/h and the speed of the boat in still water is 10 km/h. Find the distance between A and B (in km).

- Ans**
- 1. 100
 - 2. 120
 - 3. 150
 - 4. 75

Question ID : 264330153854

Option 1 ID : 264330602880

Option 2 ID : 264330602879

Option 3 ID : 264330602881

Option 4 ID : 264330602882

Status : Answered

Chosen Option : 2

Q.10 Raju sold an article to Ravi at 10% gain. Ravi sold the article to Ramu at a loss of 10%. If Ramu paid ₹1,485 to Ravi, find the selling price of Raju to Ravi.

- Ans**
- 1. ₹1,200
 - 2. ₹1,500
 - 3. ₹1,650
 - 4. ₹1,600

Question ID : 264330153840

Option 1 ID : 264330602825

Option 2 ID : 264330602823

Option 3 ID : 264330602826

Option 4 ID : 264330602824

Status : Answered

Chosen Option : 3

Q.11 A and B can do a piece of work in 4 days, B and C can do the same work in 5 days, A and C can do it in 10 days. If A, B, C work together, in how many days can they complete the work?

- Ans**
- 1. $3\frac{11}{7}$
 - 2. $11\frac{3}{7}$
 - 3. $3\frac{7}{11}$
 - 4. $11\frac{7}{3}$

Question ID : 264330156009

Option 1 ID : 264330611437

Option 2 ID : 264330611436

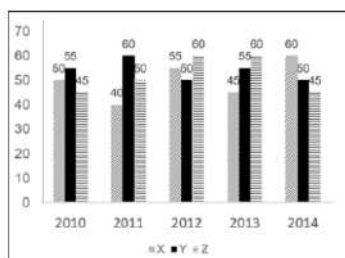
Option 3 ID : 264330611438

Option 4 ID : 264330611435

Status : Answered

Chosen Option : 3

- Q.12** The graph shows the production of tyres (in Lakhs) by three different companies X, Y, and Z over the years.
Directions: Study the following graph carefully to answer the question given below it.



What is the difference between the average production per year of the company with the highest average production and that of the company with the lowest average production in Lakhs?

- Ans**
- 1. 2
 - 2. 6
 - 3. 8
 - 4. 4

Question ID : 264330153891
 Option 1 ID : 264330603027
 Option 2 ID : 264330603029
 Option 3 ID : 264330603030
 Option 4 ID : 264330603028
 Status : Answered
 Chosen Option : 4

- Q.13** What is the mean proportional of 9.61 and 3.61?

- Ans**
- 1. 3.17
 - 2. 5.89
 - 3. 4.87
 - 4. 6.78

Question ID : 264330154085
 Option 1 ID : 264330603803
 Option 2 ID : 264330603805
 Option 3 ID : 264330603804
 Option 4 ID : 264330603806
 Status : Answered
 Chosen Option : 2

- Q.14** Two numbers A and B are such that the sum of 6% of A and 4% of B is two-fifth of the sum of 7% of A and 11% of B, then the ratio A : B is:

- Ans**
- 1. 3 : 7
 - 2. 5 : 8
 - 3. 1 : 8
 - 4. 1 : 7

Question ID : 264330154088
 Option 1 ID : 264330603816
 Option 2 ID : 264330603818
 Option 3 ID : 264330603817
 Option 4 ID : 264330603815
 Status : Answered
 Chosen Option : 3

Q.15 Two trains of length 110 m and 85 m are moving in the same direction at 12 m/s and 7 m/s, respectively. Find the time (in seconds) taken by the faster train to cross the slower train.

- Ans** 1. 39
 2. 35
 3. 19
 4. 29

Question ID : 264330155753
Option 1 ID : 264330610418
Option 2 ID : 264330610417
Option 3 ID : 264330610415
Option 4 ID : 264330610416
Status : Answered
Chosen Option : 1

Q.16 In what ratio must a grocer mix two varieties of rice costing ₹128 and ₹143 per kg, respectively, to get a mixture of rice worth ₹137.75 per kg?

- Ans** 1. 12:5
 2. 7:13
 3. 5:4
 4. 6:7

Question ID : 264330153759
Option 1 ID : 264330602499
Option 2 ID : 264330602500
Option 3 ID : 264330602501
Option 4 ID : 264330602502
Status : Answered
Chosen Option : 2

Q.17 Two persons take steps of 77 cm and 88 cm, respectively. If they start in step, then what is the minimum distance (in cm) they should cover so that both of them can cover the distance in complete steps?

- Ans** 1. 968
 2. 828
 3. 616
 4. 560

Question ID : 264330156295
Option 1 ID : 264330612581
Option 2 ID : 264330612580
Option 3 ID : 264330612582
Option 4 ID : 264330612579
Status : Answered
Chosen Option : 3

Q.18 The surface area of a sphere is 616 cm^2 , find its diameter.

Take $\pi = \frac{22}{7}$

- Ans**
- 1. 14 cm
 - 2. 2 cm
 - 3. 4 cm
 - 4. 3 cm

Question ID : 264330156369

Option 1 ID : 264330612875

Option 2 ID : 264330612876

Option 3 ID : 264330612878

Option 4 ID : 264330612877

Status : Answered

Chosen Option : 1

Q.19 The diameter of a metallic sphere is 6 cm. It is melted and drawn into a wire having a diameter of the cross section as 0.4 cm. Find the length of the wire (in metres).

- Ans**
- 1. 18
 - 2. 9
 - 3. 12
 - 4. 10

Question ID : 264330153866

Option 1 ID : 264330602930

Option 2 ID : 264330602929

Option 3 ID : 264330602928

Option 4 ID : 264330602927

Status : Answered

Chosen Option : 2

Q.20 A, B and C can do a piece of work in 10, 15, 12 days, respectively. A and B worked alternately for 5 days each and left. Then C joined and completed the work. In how many days did C complete the remaining work?

- Ans**
- 1. 3
 - 2. 1
 - 3. 4
 - 4. 2

Question ID : 264330153856

Option 1 ID : 264330602888

Option 2 ID : 264330602890

Option 3 ID : 264330602887

Option 4 ID : 264330602889

Status : Answered

Chosen Option : 4

Q.1 287 is related to 398 following a certain logic. Following the same logic, 378 is related to 489. To which of the following is 852 related to, following the same logic?

- Ans** 1. 643
 2. 963
 3. 346
 4. 543

Question ID : 264330151602
Option 1 ID : 264330594036
Option 2 ID : 264330594035
Option 3 ID : 264330594038
Option 4 ID : 264330594037
Status : Answered
Chosen Option : 2

Q.2 If 'A' stands for '+', 'B' stands for '×', 'C' stands for '÷' and 'D' stands for '-', what will come in place of the question mark (?) in the following equation?
(87 A 29) B 14 D 24 C 14 C 6 B 5 = ?

- Ans** 1. 68
 2. 74
 3. 62
 4. 56

Question ID : 264330151805
Option 1 ID : 264330594848
Option 2 ID : 264330594850
Option 3 ID : 264330594849
Option 4 ID : 264330594847
Status : Answered
Chosen Option : 3

Q.3 What should come in place of '?' in the given series?

9 15 33 87 ? 735 2193

- Ans** 1. 241
 2. 249
 3. 237
 4. 225

Question ID : 264330151483
Option 1 ID : 264330593561
Option 2 ID : 264330593562
Option 3 ID : 264330593560
Option 4 ID : 264330593559
Status : Answered
Chosen Option : 2

Q.4 What should come in place of ? in the given series based on the English alphabetical order?

CNT, FQU, ITV, LWW, ?

- Ans**
- 1. OZX
 - 2. NYY
 - 3. MXZ
 - 4. LYX

Question ID : 264330155786
Option 1 ID : 264330610550
Option 2 ID : 264330610549
Option 3 ID : 264330610548
Option 4 ID : 264330610547
Status : Answered
Chosen Option : 1

Q.5 38 is related to 49 following a certain logic. Following the same logic, 64 is related to 75. To which of the following is 83 related to, following the same logic?

- Ans**
- 1. 93
 - 2. 95
 - 3. 92
 - 4. 94

Question ID : 264330151593
Option 1 ID : 264330594000
Option 2 ID : 264330594002
Option 3 ID : 264330593999
Option 4 ID : 264330594001
Status : Answered
Chosen Option : 4

Q.6 What should come in place of '?' in the given series?

3 9 45 261 1557 ?

- Ans**
- 1. 9555
 - 2. 8572
 - 3. 9433
 - 4. 9333

Question ID : 264330151451
Option 1 ID : 264330593434
Option 2 ID : 264330593431
Option 3 ID : 264330593433
Option 4 ID : 264330593432
Status : Answered
Chosen Option : 4

Q.7 What will come in the place of '?' in the following equation, if '+' and '-' are interchanged and '×' and '÷' are interchanged?

$$32 - 512 \times 64 \div 8 + 64 = ?$$

- Ans
- 1. 42
 - 2. 22
 - 3. 32
 - 4. 52

Question ID : 264330155677

Option 1 ID : 264330610113

Option 2 ID : 264330610111

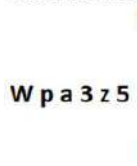
Option 3 ID : 264330610112

Option 4 ID : 264330610114

Status : Answered

Chosen Option : 3

Q.8 Select the correct mirror image of the given figure when the mirror is placed at MN as shown below.



- Ans
- 1. 5z3 ap W
 - 2. z5ε ap M
 - 3. 2zz eb M
 - 4. 2zε ap W

Question ID : 264330151510

Option 1 ID : 264330593667

Option 2 ID : 264330593670

Option 3 ID : 264330593668

Option 4 ID : 264330593669

Status : Answered

Chosen Option : 4

Q.9 What should come in place of '?' in the given series?

16 65 261 1045 4181 ?

- Ans
- 1. 16945
 - 2. 16273
 - 3. 16725
 - 4. 16892

Question ID : 264330151475

Option 1 ID : 264330593530

Option 2 ID : 264330593527

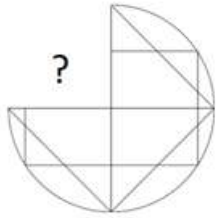
Option 3 ID : 264330593528

Option 4 ID : 264330593529

Status : Answered

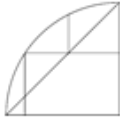
Chosen Option : 3

Q.10 Identify the figure that completes the pattern (rotation is NOT allowed).



Ans

✗ 1.



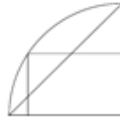
✗ 2.



✗ 3.



✓ 4.



Question ID : 264330154514

Option 1 ID : 264330605521

Option 2 ID : 264330605520

Option 3 ID : 264330605519

Option 4 ID : 264330605522

Status : Answered

Chosen Option : 4

Q.11 Select the word-pair that best represents a similar relationship to the one expressed in the pair of words given below.

(The words must be considered as meaningful English words and must not be related to each other based on the number of letters/number of consonants/vowels in the word)

Reflection : Light

Ans

✗ 1. Sentiment : Feeling

✓ 2. Echo : Sound

✗ 3. Iris : Sight

✗ 4. Movie : Scene

Question ID : 264330154638

Option 1 ID : 264330606017

Option 2 ID : 264330606016

Option 3 ID : 264330606018

Option 4 ID : 264330606015

Status : Answered

Chosen Option : 2

Q.12 Read the given statements and conclusions carefully. You have to take the given statements to be true even if they seem to be at variance from commonly known facts. You have to decide which conclusion/s logically follow/s from the given statements.

Statements: All rags are carpets. Some carpets are steel. Some steel are bottles.

Conclusion I: All carpets are rags.

Conclusion II: Some carpets are bottles.

- Ans**
- 1. Only conclusion (I) is follow.
 - 2. Both conclusions (I) and (II) are follow.
 - 3. Only conclusion (II) is follow.
 - 4. Neither conclusion (I) nor (II) is follow.

Question ID : 264330155925

Option 1 ID : 264330611103

Option 2 ID : 264330611106

Option 3 ID : 264330611104

Option 4 ID : 264330611105

Status : Answered

Chosen Option : 4

Q.13 Find out the correct alternative that when filled in the blanks in the same sequence will make the series logically complete.

X _AL ZH _L _KAL DNA_ _QAL

- Ans**
- 1. FBPSB
 - 2. FABLE
 - 3. EABLF
 - 4. EBFLA

Question ID : 264330154726

Option 1 ID : 264330606370

Option 2 ID : 264330606368

Option 3 ID : 264330606369

Option 4 ID : 264330606367

Status : Answered

Chosen Option : 3

Q.14 The position of how many letters will remain unchanged if each of the letter in the word 'FINGER' is arranged in alphabetical order?

- Ans**
- 1. Two
 - 2. One
 - 3. Three
 - 4. Four

Question ID : 264330154326

Option 1 ID : 264330604769

Option 2 ID : 264330604770

Option 3 ID : 264330604768

Option 4 ID : 264330604767

Status : Answered

Chosen Option : 2

Q.15 In a certain code language, 'BLUE' is coded as '1542' and 'ABLE' is coded as '1745'. What is the code for 'A' in the given code language?

- Ans** 1. 7
 2. 1
 3. 4
 4. 5

Question ID : **264330151690**
Option 1 ID : **264330594390**
Option 2 ID : **264330594387**
Option 3 ID : **264330594389**
Option 4 ID : **264330594388**
Status : **Answered**
Chosen Option : **1**

Q.16 Read the given statement(s) and conclusions carefully. Assuming that the information given in the statements is true, even if it appears to be at variance with commonly known facts, decide which of the given conclusions logically follow(s) from the statement(s).

Statements: All chocolates are sweets. Some sweets are harmful.

Conclusions:

- (I) All Chocolates are harmful.
(II) Some harmful are chocolates.

- Ans** 1. Neither conclusion (I) nor (II) is follows.
 2. Both conclusions (I) and (II) are follows.
 3. Only conclusion (II) is follows.
 4. Only conclusion (I) is follows.

Question ID : **264330154433**
Option 1 ID : **264330605197**
Option 2 ID : **264330605198**
Option 3 ID : **264330605196**
Option 4 ID : **264330605195**
Status : **Answered**
Chosen Option : **1**

Q.19 Six people, P, Q, R, S, T and U are sitting in a straight line, facing north. U sits fourth to the right of R. R is not sitting at the extreme end of the line. T is the immediate neighbour of U and S. Q sits third to the left of S.

Who is sitting immediately to the right of R?

- Ans**
- 1. S
 - 2. T
 - 3. Q
 - 4. P

Question ID : 264330155549

Option 1 ID : 264330609601

Option 2 ID : 264330609602

Option 3 ID : 264330609599

Option 4 ID : 264330609600

Status : Answered

Chosen Option : 4

Q.20 Select the combination of letters that when sequentially placed in the blanks of the given series, will complete the series.

P _ _ P O _ P _ P _ O P

- Ans**
- 1. POPPO
 - 2. POOOP
 - 3. OOOPP
 - 4. OPPOP

Question ID : 264330151650

Option 1 ID : 264330594227

Option 2 ID : 264330594229

Option 3 ID : 264330594230

Option 4 ID : 264330594228

Status : Answered

Chosen Option : 4

Section : General Awareness

Q.1 FIFA U-17 Women's World Cup 2022 matches were NOT held in which state?

- Ans**
- 1. Maharashtra
 - 2. Odisha
 - 3. Goa
 - 4. Gujarat

Question ID : 264330158223

Option 1 ID : 264330620251

Option 2 ID : 264330620254

Option 3 ID : 264330620252

Option 4 ID : 264330620253

Status : Not Answered

Chosen Option : --

Q.2 Who among the following is one of the co-authors of the book, 'Cracking The Code:My Journey in Bollywood'?

- Ans
- 1. Harshvardhan Kapoor
 - 2. Nawazuddin Siddique
 - 3. Ayushmann Khurrana
 - 4. Rajkumar Rao

Question ID : 264330161906
Option 1 ID : 264330634954
Option 2 ID : 264330634951
Option 3 ID : 264330634953
Option 4 ID : 264330634952
Status : Not Answered
Chosen Option : --

Q.3 In 1873, who published the first photograph of nerve tissue stained with the black reaction technique, describing a whole nerve cell?

- Ans
- 1. Gunter Blobel
 - 2. Camillo Golgi
 - 3. William Harvey
 - 4. Paul Ehrlich

Question ID : 264330161088
Option 1 ID : 264330631686
Option 2 ID : 264330631685
Option 3 ID : 264330631683
Option 4 ID : 264330631684
Status : Not Answered
Chosen Option : --

Q.4 In October 2022, Virat Kohli became the first Indian to complete how many runs in T20 cricket history?

- Ans
- 1. 11000
 - 2. 9000
 - 3. 5000
 - 4. 15000

Question ID : 264330158362
Option 1 ID : 264330620809
Option 2 ID : 264330620808
Option 3 ID : 264330620807
Option 4 ID : 264330620810
Status : Not Answered
Chosen Option : --

Q.5 According to Sikh literature, the birth anniversary of Guru Nanak Dev is celebrated on the full moon day of the Indian lunar month _____.

- Ans
- 1. Magh
 - 2. Paush
 - 3. Ashada
 - 4. Kartik

Question ID : 264330160833
Option 1 ID : 264330630666
Option 2 ID : 264330630664
Option 3 ID : 264330630663
Option 4 ID : 264330630665
Status : Not Answered
Chosen Option : --

Q.6 Yakshagana is a folk dance that belongs to the state of _____.

- Ans
- 1. Kerala
 - 2. Karnataka
 - 3. Haryana
 - 4. Rajasthan

Question ID : 264330159057
Option 1 ID : 264330623587
Option 2 ID : 264330623588
Option 3 ID : 264330623589
Option 4 ID : 264330623590
Status : Answered
Chosen Option : 2

Q.7 The brick temple of Bhitargaon is situated in which state?

- Ans
- 1. Odisha
 - 2. Jharkhand
 - 3. Uttar Pradesh
 - 4. Madhya Pradesh

Question ID : 264330160781
Option 1 ID : 264330630456
Option 2 ID : 264330630455
Option 3 ID : 264330630458
Option 4 ID : 264330630457
Status : Not Answered
Chosen Option : --

Q.8 Which of the following movements was founded in Bengal?

- Ans
- 1. Ramakrishna Mission
 - 2. Arya Samaj
 - 3. Satyashodhak Samaj
 - 4. Prarthana Samaj

Question ID : 264330160891
Option 1 ID : 264330630896
Option 2 ID : 264330630895
Option 3 ID : 264330630898
Option 4 ID : 264330630897
Status : Answered
Chosen Option : 1

Q.9 On 15 August 1947, the first prime minister of India, Jawaharlal Nehru, raised the Indian National Flag above the _____ of Red Fort in Delhi.

- Ans**
- 1. Delhi Gate
 - 2. Kashmiri Gate
 - 3. Ajmeri Gate
 - 4. Lahori Gate

Question ID : 264330161347
Option 1 ID : 264330632717
Option 2 ID : 264330632715
Option 3 ID : 264330632718
Option 4 ID : 264330632716
Status : Answered
Chosen Option : 1

Q.10 'Mandarin' is the official language of which neighbouring country of India?

- Ans**
- 1. Afghanistan
 - 2. Bhutan
 - 3. Sri Lanka
 - 4. China

Question ID : 264330161563
Option 1 ID : 264330633579
Option 2 ID : 264330633581
Option 3 ID : 264330633580
Option 4 ID : 264330633582
Status : Answered
Chosen Option : 4

Q.11 Which of the following is used to measure the total output of goods and services in an economy including depreciation during a specific period within country?

- Ans**
- 1. Net Domestic Product (NDP)
 - 2. Gross National Product (GNP)
 - 3. Net National Product (NNP)
 - 4. Gross Domestic Product (GDP)

Question ID : 264330157311
Option 1 ID : 264330616610
Option 2 ID : 264330616608
Option 3 ID : 264330616609
Option 4 ID : 264330616607
Status : Answered
Chosen Option : 1

Q.12 Which of the following is NOT related to the sport of swimming?

- Ans**
- 1. Breaststroke
 - 2. Back stroke
 - 3. Freestyle
 - 4. Penalty Corner

Question ID : 264330158244
Option 1 ID : 264330620337
Option 2 ID : 264330620336
Option 3 ID : 264330620335
Option 4 ID : 264330620338
Status : Answered
Chosen Option : 4

Q.13 The East-West corridor, which is a part of the Golden Quadrilateral super highways, links which two cities of India from the following?

- Ans
- 1. Ahmadnagar and Imphal
 - 2. Silchar and Porbander
 - 3. Jaipur and Gangtok
 - 4. Gandhi Nagar and Silchar

Question ID : 264330161490
Option 1 ID : 264330633290
Option 2 ID : 264330633289
Option 3 ID : 264330633288
Option 4 ID : 264330633287
Status : Answered
Chosen Option : 2

Q.14 What is the name of the seventh most abundant metal in the earth's crust, which is derived from the medieval Latin word 'Kalium'?

- Ans
- 1. Aluminium
 - 2. Magnesium
 - 3. Calcium
 - 4. Potassium

Question ID : 264330161060
Option 1 ID : 264330631574
Option 2 ID : 264330631571
Option 3 ID : 264330631573
Option 4 ID : 264330631572
Status : Answered
Chosen Option : 4

Q.15 What is the aim of Article 44 of the Indian Constitution?

- Ans
- 1. To protect every monument or place of artistic or historic interest
 - 2. To separate judiciary from the executive in the public services of the State
 - 3. To protect and improve the environment and safeguard the forests and wildlife of the country
 - 4. To secure for the citizen, a uniform civil code through the territory of India

Question ID : 264330162253
Option 1 ID : 264330636341
Option 2 ID : 264330636342
Option 3 ID : 264330636340
Option 4 ID : 264330636339
Status : Answered
Chosen Option : 4

Q.16 Which of the following novels of Kamleshwar was awarded the Sahitya Akademi Award in 2003?

- Ans
- 1. Jalti Hui Nadi
 - 2. Kaali Aandhi
 - 3. Kitne Pakistan
 - 4. Ek Sadak Sattavan Galiyan

Question ID : 264330161762
Option 1 ID : 264330634377
Option 2 ID : 264330634378
Option 3 ID : 264330634376
Option 4 ID : 264330634375
Status : Not Answered
Chosen Option : --

Q.17 Which of the following institutes was founded by MG Ranade and GV Joshi?

- Ans
- 1. Abhinav Bharat
 - 2. The Indian National Congress
 - 3. The Bombay Presidency Association
 - 4. Poona Sarvajanik Sabha

Question ID : 264330160883
Option 1 ID : 264330630866
Option 2 ID : 264330630865
Option 3 ID : 264330630863
Option 4 ID : 264330630864
Status : Answered
Chosen Option : 1

Q.18 Roshan Kumari, Shovana Narayan, Maya Rao and Kumudini Lakhia are eminent _____ artists.

- Ans
- 1. Odissi
 - 2. Kuchipudi
 - 3. Kathak
 - 4. Manipuri

Question ID : 264330160812
Option 1 ID : 264330630580
Option 2 ID : 264330630581
Option 3 ID : 264330630579
Option 4 ID : 264330630582
Status : Answered
Chosen Option : 3

Q.19 Rani Machaiah is a _____ folk dancer who was awarded Padma Shri in 2023.

- Ans
- 1. Ummathat
 - 2. Lambadi
 - 3. Gussadi
 - 4. Dhimsa

Question ID : 264330155487
Option 1 ID : 264330609352
Option 2 ID : 264330609354
Option 3 ID : 264330609351
Option 4 ID : 264330609353
Status : Not Answered
Chosen Option : --

Q.20 What is the difference between a debit card and a credit card?

- Ans**
- 1. Debit cards are used for online transactions, while credit cards are used for in-person purchases.
 - 2. Credit cards require a PIN, while debit cards require a signature.
 - 3. Debit cards withdraw money directly from a bank account, while credit cards allow borrowing up to a certain limit.
 - 4. Debit cards have higher interest rates than credit cards.

Question ID : 264330157309
Option 1 ID : 264330616599
Option 2 ID : 264330616602
Option 3 ID : 264330616600
Option 4 ID : 264330616601
Status : Answered
Chosen Option : 3

Q.21 The Constitution (Scheduled Tribes) Order (Second Amendment) Bill, 2022 has included Narikoravan and Kurivikkaran communities in the list of Scheduled Tribes of which state?

- Ans**
- 1. Bihar
 - 2. Tamil Nadu
 - 3. Chhattisgarh
 - 4. Odisha

Question ID : 264330158333
Option 1 ID : 264330620691
Option 2 ID : 264330620694
Option 3 ID : 264330620693
Option 4 ID : 264330620692
Status : Answered
Chosen Option : 2

Q.22 Which group of musicians were awarded by 'Bharat Ratna' from the following? (As of May 2023.)

- Ans**
- 1. Anu Malik and Udit Narayan
 - 2. Pandit Ravi Shankar and Pandit Bhimsen Joshi
 - 3. Asha Bhosle and Kishore Kumar
 - 4. AR Rahman and Hariprasad Chaurasia

Question ID : 264330155511
Option 1 ID : 264330609449
Option 2 ID : 264330609447
Option 3 ID : 264330609450
Option 4 ID : 264330609448
Status : Answered
Chosen Option : 2

Q.23 Which river is also known as Tsangpo?

- Ans**
- 1. Ganga river
 - 2. Gandak river
 - 3. Kaveri river
 - 4. Brahmaputra river

Question ID : 264330160151
Option 1 ID : 264330627943
Option 2 ID : 264330627946
Option 3 ID : 264330627945
Option 4 ID : 264330627944
Status : Answered
Chosen Option : 4

Q.24 What is the destination of the water drained off by the Nile river?

- Ans**
- 1. Lake Victoria
 - 2. Indian Ocean
 - 3. Mediterranean Sea
 - 4. Lake Tanganyika

Question ID : 264330161329
Option 1 ID : 264330632646
Option 2 ID : 264330632643
Option 3 ID : 264330632644
Option 4 ID : 264330632645
Status : Answered
Chosen Option : 3

Q.25 Article 149 of the Constitution deals with _____.

- Ans**
- 1. the qualifications required for the appointment of the Comptroller and Auditor-General of India
 - 2. the duties and powers of the Comptroller and Auditor-General of India
 - 3. the term of office of the Comptroller and Auditor-General of India
 - 4. the appointment of the Comptroller and Auditor-General of India

Question ID : 264330161287
Option 1 ID : 264330632477
Option 2 ID : 264330632475
Option 3 ID : 264330632478
Option 4 ID : 264330632476
Status : Answered
Chosen Option : 4

Q.1 Select the most appropriate ANTONYM of the given word.
Feud

- Ans 1. Gross
 2. Peril
 3. Harmony
 4. Vigour

Question ID : 264330152677
Option 1 ID : 264330598312
Option 2 ID : 264330598314
Option 3 ID : 264330598313
Option 4 ID : 264330598311
Status : Answered
Chosen Option : 4

Q.2 Parts of the following sentence have been given as options. Select the option that contains an error.

All these things happen/ because she do not / pay heed to my words.

- Ans 1. pay heed to my words
 2. All these things happen
 3. No error
 4. because she do not

Question ID : 264330155379
Option 1 ID : 264330608933
Option 2 ID : 264330608931
Option 3 ID : 264330608934
Option 4 ID : 264330608932
Status : Not Answered
Chosen Option : --

Q.3 Select the most appropriate option that can substitute the underlined segment in the given sentence.

Professor said that I will be late for the lecture.

- Ans 1. he shall be late for the lecture
 2. he is late for the lecture
 3. he would be late for the lecture
 4. he may be late for the lecture

Question ID : 264330152712
Option 1 ID : 264330598448
Option 2 ID : 264330598449
Option 3 ID : 264330598447
Option 4 ID : 264330598450
Status : Answered
Chosen Option : 3

Q.4 Select the **INCORRECTLY** spelt word.

- Ans** 1. Separate
 2. Accommodate
 3. Definitely
 4. Embarass

Question ID : 264330152644
Option 1 ID : 264330598182
Option 2 ID : 264330598179
Option 3 ID : 264330598180
Option 4 ID : 264330598181
Status : Answered
Chosen Option : 1

Q.5 Select the most appropriate meaning of the given idiom.
Sell like hot cakes

- Ans** 1. Quick sell out
 2. Selling cakes
 3. Being ignored
 4. Eating hot cake

Question ID : 264330152725
Option 1 ID : 264330598500
Option 2 ID : 264330598501
Option 3 ID : 264330598499
Option 4 ID : 264330598502
Status : Answered
Chosen Option : 1

Q.6 Select the most appropriate option that can substitute the underlined segment in the given sentence.

Andrew will playing basketball at the college tournament.

- Ans** 1. are play the
 2. are play
 3. is playing
 4. is played

Question ID : 264330153473
Option 1 ID : 264330601408
Option 2 ID : 264330601407
Option 3 ID : 264330601409
Option 4 ID : 264330601410
Status : Answered
Chosen Option : 3

Q.7 Select the most appropriate word to fill in the blank.
Hardik Pandya hit four _____ fours and scored 72 runs in the match.

- Ans 1. continuous
 2. consecutive
 3. ongoing
 4. constant

Question ID : 264330153507
Option 1 ID : 264330601540
Option 2 ID : 264330601539
Option 3 ID : 264330601542
Option 4 ID : 264330601541
Status : Answered
Chosen Option : 2

Q.8 Select the sentence that has NO spelling errors.

- Ans 1. The doctor presribed some medicine to alleviate my parsistent cough, which has been boathering me for days.
 2. The doctor precribed some medicine to aleviate my persistent cough, which has been bothering me for days.
 3. The doctor prescribed some medicine to aleviate my parsistent cough, which has been boathering me for days.
 4. The doctor prescribed some medicine to alleviate my persistent cough, which has been bothering me for days.

Question ID : 264330152649
Option 1 ID : 264330598201
Option 2 ID : 264330598200
Option 3 ID : 264330598202
Option 4 ID : 264330598199
Status : Answered
Chosen Option : 4

Q.9 Select the most appropriate synonym of the bracketed word in the following sentence to fill in the blank.
The athlete's perseverance and mental toughness _____ (facilitate) her to overcome adversity and achieve her goals.

- Ans 1. restricted
 2. enabled
 3. limited
 4. hindered

Question ID : 264330152653
Option 1 ID : 264330598216
Option 2 ID : 264330598218
Option 3 ID : 264330598215
Option 4 ID : 264330598217
Status : Answered
Chosen Option : 2

Q.10 The following sentence has been split into four segments. Identify the segment that contains a grammatical error.

Throughout my career as a journalist, / I covered many important stories and / interviewed numerous individuals, which allow me / to share important information and insights with my readers.

- Ans
- 1. to share important information and insights with my readers
 - 2. I covered many important stories and
 - 3. Throughout my career as a journalist,
 - 4. interviewed numerous individuals, which allow me

Question ID : 264330144182

Option 1 ID : 264330564994

Option 2 ID : 264330564992

Option 3 ID : 264330564991

Option 4 ID : 264330564993

Status : Answered

Chosen Option : 4

Q.11 The following sentence has been split into four segments. Identify the segment that contains a grammatical error.

Harish says / that his sister / loves to play / harmonium.

- Ans
- 1. harmonium
 - 2. loves to play
 - 3. Harish says
 - 4. that his sister

Question ID : 264330153165

Option 1 ID : 264330600222

Option 2 ID : 264330600221

Option 3 ID : 264330600219

Option 4 ID : 264330600220

Status : Answered

Chosen Option : 1

Q.12 Select the most appropriate option that can substitute the underlined segment in the following sentence.

Selling, purchasing, and using an illegally copied product is a criminal offence.

- Ans
- 1. an obsolete
 - 2. a pirated
 - 3. an outlawed
 - 4. a crooked

Question ID : 264330152633

Option 1 ID : 264330598135

Option 2 ID : 264330598136

Option 3 ID : 264330598137

Option 4 ID : 264330598138

Status : Answered

Chosen Option : 2

Q.13 Select the most appropriate option to fill in the blank.
The hiring manager has already offered you the job; now, _____ to accept or decline the offer.

- Ans
- 1. a penny for your thoughts
 - 2. the ball is in your court
 - 3. pull your leg
 - 4. get your act together

Question ID : 264330151891
Option 1 ID : 264330595184
Option 2 ID : 264330595183
Option 3 ID : 264330595185
Option 4 ID : 264330595186
Status : Answered
Chosen Option : 2

Q.14 Select the most appropriate option to fill in the blank.
Oberon doesn't like the way Demetrius _____ to Helena. (Credit: A Midsummer Night's Dream)

- Ans
- 1. talked
 - 2. talks
 - 3. talking
 - 4. to talk

Question ID : 264330153511
Option 1 ID : 264330601555
Option 2 ID : 264330601556
Option 3 ID : 264330601557
Option 4 ID : 264330601558
Status : Answered
Chosen Option : 2

Q.15 Select the most appropriate meaning of the given idiom.
Let sleeping dogs lie

- Ans
- 1. To let somebody sleep
 - 2. To fall sick intentionally
 - 3. Leave an existing situation as it is
 - 4. To care for the pet

Question ID : 264330156172
Option 1 ID : 264330612088
Option 2 ID : 264330612089
Option 3 ID : 264330612090
Option 4 ID : 264330612087
Status : Answered
Chosen Option : 3

Q.16 Select the option that can be used as a one-word substitute for the given group of words.

A cage made for birds.

OR

A place for keeping the birds in a confined space.

- Ans
- 1. Aquarium
 - 2. Apiary
 - 3. Aviary
 - 4. Arena

Question ID : 264330153553
Option 1 ID : 264330601713
Option 2 ID : 264330601711
Option 3 ID : 264330601714
Option 4 ID : 264330601712
Status : Answered
Chosen Option : 3

Q.17 Select the most appropriate synonym of the given word.
Repulsive

- Ans
- 1. Attractive
 - 2. Reliable
 - 3. Disgusting
 - 4. Uniform

Question ID : 264330151922
Option 1 ID : 264330595303
Option 2 ID : 264330595305
Option 3 ID : 264330595304
Option 4 ID : 264330595306
Status : Answered
Chosen Option : 3

Q.18 Select the option that rectifies the spelling of the underlined word in the given sentence.

The sergent brought in a lot of changes as soon as he was given charge.

- Ans
- 1. seargeant
 - 2. sergeannt
 - 3. sergant
 - 4. sergeant

Question ID : 264330153156
Option 1 ID : 264330600185
Option 2 ID : 264330600184
Option 3 ID : 264330600183
Option 4 ID : 264330600186
Status : Answered
Chosen Option : 3

Q.19 The given sentence contains an error. Select the option that correctly rectifies the error.

The boy told his mother that he saw the most tall giraffe at the zoo.

- Ans 1. The boy told his mother that he saw the tallest giraffe at the zoo.
2. The boy told his mother that he saw the most taller giraffe at the zoo.
3. The boy told his mother that he saw the most tallest giraffe at the zoo.
4. The boy told his mother that he saw the more taller giraffe at the zoo.

Question ID : 264330152606

Option 1 ID : 264330598030

Option 2 ID : 264330598028

Option 3 ID : 264330598029

Option 4 ID : 264330598027

Status : Answered

Chosen Option : 1

Q.20 Select the most appropriate meaning of the given idiom.

Call the shots

- Ans 1. To be a follower that makes less important decision
2. To be in a position to make decisions that influences a situation
3. To be in a powerless position that follows orders
4. To be in a neutral position

Question ID : 264330153073

Option 1 ID : 264330599857

Option 2 ID : 264330599856

Option 3 ID : 264330599858

Option 4 ID : 264330599855

Status : Answered

Chosen Option : 2

Comprehension:

In the following passage, some words have been deleted. Fill in the blanks with the help of the alternatives given. Select the most appropriate option for each blank.

That evening we sat in the courtyard of the hotel once more, (1) _____ the sun sink below the western isles. I told Alexi what had happened that day. I (2) _____ I could glimpse the grey stone wall of Lismore House (3) _____ its island hilltop, the red light of the setting sun glinting from the windows, and from there the wasted frame of Jonathan Blake gazing out across the sea, on nothing, his boy waiting for him to die. But it was my (4) _____, simply the image on my mind, like the image burned on to your eyes when you have (5) _____ too long at the sun, the passing footprint of a creature long gone.

SubQuestion No : 21

Q.21 Select the most appropriate option to fill in blank no. 1.

- Ans 1. watching
2. wallowing
3. risking
4. practising

Question ID : 264330153445

Option 1 ID : 264330601299

Option 2 ID : 264330601302

Option 3 ID : 264330601301

Option 4 ID : 264330601300

Status : Answered

Chosen Option : 1

Comprehension:

In the following passage, some words have been deleted. Fill in the blanks with the help of the alternatives given. Select the most appropriate option for each blank.

That evening we sat in the courtyard of the hotel once more, (1) _____ the sun sink below the western isles. I told Alexi what had happened that day. I (2) _____ I could glimpse the grey stone wall of Lismore House (3) _____ its island hilltop, the red light of the setting sun glinting from the windows, and from there the wasted frame of Jonathan Blake gazing out across the sea, on nothing, his boy waiting for him to die. But it was my (4) _____, simply the image on my mind, like the image burned on to your eyes when you have (5) _____ too long at the sun, the passing footprint of a creature long gone.

SubQuestion No : 22

Q.22 Select the most appropriate option to fill in blank no. 2.

- Ans 1. fancied
 2. groped
 3. imbibed
 4. translated

Question ID : 264330153446

Option 1 ID : 264330601305

Option 2 ID : 264330601306

Option 3 ID : 264330601303

Option 4 ID : 264330601304

Status : Answered

Chosen Option : 1

Comprehension:

In the following passage, some words have been deleted. Fill in the blanks with the help of the alternatives given. Select the most appropriate option for each blank.

That evening we sat in the courtyard of the hotel once more, (1) _____ the sun sink below the western isles. I told Alexi what had happened that day. I (2) _____ I could glimpse the grey stone wall of Lismore House (3) _____ its island hilltop, the red light of the setting sun glinting from the windows, and from there the wasted frame of Jonathan Blake gazing out across the sea, on nothing, his boy waiting for him to die. But it was my (4) _____, simply the image on my mind, like the image burned on to your eyes when you have (5) _____ too long at the sun, the passing footprint of a creature long gone.

SubQuestion No : 23

Q.23 Select the most appropriate option to fill in blank no. 3.

- Ans 1. off
 2. on
 3. aside
 4. for

Question ID : 264330153447

Option 1 ID : 264330601307

Option 2 ID : 264330601308

Option 3 ID : 264330601309

Option 4 ID : 264330601310

Status : Answered

Chosen Option : 2

Comprehension:

In the following passage, some words have been deleted. Fill in the blanks with the help of the alternatives given. Select the most appropriate option for each blank.

That evening we sat in the courtyard of the hotel once more, (1) _____ the sun sink below the western isles. I told Alexi what had happened that day. I (2) _____ I could glimpse the grey stone wall of Lismore House (3) _____ its island hilltop, the red light of the setting sun glinting from the windows, and from there the wasted frame of Jonathan Blake gazing out across the sea, on nothing, his boy waiting for him to die. But it was my (4) _____, simply the image on my mind, like the image burned on to your eyes when you have (5) _____ too long at the sun, the passing footprint of a creature long gone.

SubQuestion No : 24

Q.24 Select the most appropriate option to fill in blank no. 4.

- Ans 1. dribble
 2. straw
 3. fantasy
 4. habitat

Question ID : 264330153448

Option 1 ID : 264330601312

Option 2 ID : 264330601311

Option 3 ID : 264330601313

Option 4 ID : 264330601314

Status : Answered

Chosen Option : 3

Comprehension:

In the following passage, some words have been deleted. Fill in the blanks with the help of the alternatives given. Select the most appropriate option for each blank.

That evening we sat in the courtyard of the hotel once more, (1) _____ the sun sink below the western isles. I told Alexi what had happened that day. I (2) _____ I could glimpse the grey stone wall of Lismore House (3) _____ its island hilltop, the red light of the setting sun glinting from the windows, and from there the wasted frame of Jonathan Blake gazing out across the sea, on nothing, his boy waiting for him to die. But it was my (4) _____, simply the image on my mind, like the image burned on to your eyes when you have (5) _____ too long at the sun, the passing footprint of a creature long gone.

SubQuestion No : 25

Q.25 Select the most appropriate option to fill in blank no. 5.

- Ans 1. resumed
 2. rusted
 3. blocked
 4. stared

Question ID : 264330153449

Option 1 ID : 264330601317

Option 2 ID : 264330601315

Option 3 ID : 264330601316

Option 4 ID : 264330601318

Status : Answered

Chosen Option : 4

SSC MTS 2023 Tier 1 Sept 1 Shift 2 Question Paper with Answers

Roll Number	
Candidate Name	
Exam Date	01/09/2023
Exam Time	12:30 PM - 2:30 PM
Subject	MTS Non Tech Havaladar CBIC and CBN Examination 2023

Section : Numerical and Mathematical Ability

Q.1 The area of a trapezium shaped field is 1720 m^2 , the distance between its parallel sides is 40 m and the length of one of the parallel sides is 48 m. What is the length (in m) of the other parallel side?

- Ans**
- 1. 56
 - 2. 38
 - 3. 42
 - 4. 34

Question ID : 264330153788

Option 1 ID : 264330602615

Option 2 ID : 264330602616

Option 3 ID : 264330602617

Option 4 ID : 264330602618

Status : Answered

Chosen Option : 2

Q.2 Ram can do a piece of work in 18 hours. Shyam and Naresh can do it in 9 hours. Ram and Naresh can do it in 12 hours. How long will Shyam alone take to do it?

- Ans**
- 1. 15 hours
 - 2. 9 hours
 - 3. 12 hours
 - 4. 11 hours

Question ID : 264330156566

Option 1 ID : 264330613654

Option 2 ID : 264330613651

Option 3 ID : 264330613653

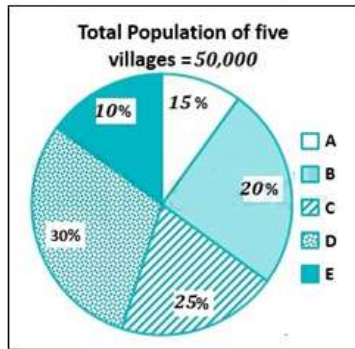
Option 4 ID : 264330613652

Status : Answered

Chosen Option : 3

Q.3 Study the given pie-chart and answer the question that follows.

The pie-chart shows the percentage of the population in five villages in a year.



Find the ratio of population in villages B and D.

- Ans
- 1. 1 : 3
 - 2. 3 : 1
 - 3. 2 : 3
 - 4. 3 : 2

Question ID : 264330156243

Option 1 ID : 264330612371

Option 2 ID : 264330612373

Option 3 ID : 264330612372

Option 4 ID : 264330612374

Status : Answered

Chosen Option : 3

Q.4 Find the fourth proportional to $(a + b)^2 \times (a^3 - b^3)$, $(a^3 + b^3)$, $(a^2 - b^2)$.

- Ans
- 1. $\frac{(a^2 - ab + b^2)}{(a + b)}$
 - 2. $\frac{(a^2 + ab + b^2)}{(a - b)}$
 - 3. $\frac{(a^2 - ab + b^2)}{(a^2 + ab + b^2)}$
 - 4. $\frac{(a^2 + ab + b^2)}{(a^2 - b^2)}$

Question ID : 264330153846

Option 1 ID : 264330602849

Option 2 ID : 264330602848

Option 3 ID : 264330602850

Option 4 ID : 264330602847

Status : Not Attempted and Marked For Review

Chosen Option : --

Q.5 If $(x - 2)$ is a factor of $(2x^2 + 12kx - 25k)$, then what is the value of k ?

- Ans
- 1. 2
 - 2. 8
 - 3. 4
 - 4. 6

Question ID : 264330156203

Option 1 ID : 264330612211

Option 2 ID : 264330612214

Option 3 ID : 264330612212

Option 4 ID : 264330612213

Status : **Not Attempted and Marked For Review**

Chosen Option : --

Q.6 A 360 m long train running at the speed of 108 km/h crosses another train running in the opposite direction at the speed of 90 km/h in 12 seconds. What is the length (in m) of the other train?

- Ans
- 1. 330
 - 2. 270
 - 3. 300
 - 4. 345

Question ID : 264330156491

Option 1 ID : 264330613351

Option 2 ID : 264330613352

Option 3 ID : 264330613354

Option 4 ID : 264330613353

Status : **Answered**

Chosen Option : 3

Q.7 A cuboid with dimension $2 \times 4 \times 1$ units is melted and a new cube is made. What is the total surface area of the cube formed in square units?

- Ans
- 1. 32
 - 2. 28
 - 3. 24
 - 4. 16

Question ID : 264330153827

Option 1 ID : 264330602772

Option 2 ID : 264330602771

Option 3 ID : 264330602773

Option 4 ID : 264330602774

Status : **Answered**

Chosen Option : 3

Q.8 Samridhi sold a gold ring at a loss of 26%. If the cost price of the gold ring is ₹38,500, what is the selling price of the gold ring?

- Ans** 1. ₹28,490
 2. ₹30,500
 3. ₹29,590
 4. ₹38,600

Question ID : 264330156181
Option 1 ID : 264330612125
Option 2 ID : 264330612123
Option 3 ID : 264330612126
Option 4 ID : 264330612124
Status : Answered
Chosen Option : 1

Q.9 Student gets 62, 58, 72, 58 and 83 marks in Sanskrit, English, Mathematics, Social and Computer Science, respectively. His average marks in Mathematics, Social and Computer Science are _____ more than the average marks in Sanskrit, English and Mathematics.

- Ans** 1. 9
 2. 8
 3. 6
 4. 7

Question ID : 264330156251
Option 1 ID : 264330612406
Option 2 ID : 264330612405
Option 3 ID : 264330612403
Option 4 ID : 264330612404
Status : Answered
Chosen Option : 4

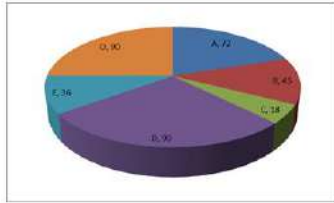
Q.10 P and Q are inversely proportional to each other and P is 10, when Q is 6. What will be the value of Q when P is 15?

- Ans** 1. 9
 2. 4
 3. 10
 4. 5

Question ID : 264330154125
Option 1 ID : 264330603963
Option 2 ID : 264330603964
Option 3 ID : 264330603966
Option 4 ID : 264330603965
Status : Marked For Review
Chosen Option : 2

Q.11 The pie diagram represents the export of different types of fabrics (in degree measure) from India during 2015.

If the income from one ton of fabric A is three times that from the fabric C, then the ratio between the income from A to C is:



- Ans**
- 1. 1 : 3
 - 2. 3 : 1
 - 3. 12 : 1
 - 4. 6 : 1

Question ID : 264330154066

Option 1 ID : 264330603730

Option 2 ID : 264330603727

Option 3 ID : 264330603728

Option 4 ID : 264330603729

Status : Answered

Chosen Option : 3

Q.12 The average marks of 13 students in a subject is 66. If the average of the first seven students is 67 and that of the last seven students is 69, then the marks of the seventh student is:

- Ans**
- 1. 99
 - 2. 91
 - 3. 97
 - 4. 94

Question ID : 264330154076

Option 1 ID : 264330603770

Option 2 ID : 264330603767

Option 3 ID : 264330603769

Option 4 ID : 264330603768

Status : Answered

Chosen Option : 4

Q.13 Shobha purchased a small plot in a residential area for ₹6,00,000 and sold it to Lakshita at a profit of 20%. Lakshita, in turn, sold it to Dinesh at a loss of 10%. How much did Dinesh pay for the plot?

- Ans**
- 1. ₹6,40,000
 - 2. ₹6,48,000
 - 3. ₹6,08,000
 - 4. ₹6,00,000

Question ID : 264330154122

Option 1 ID : 264330603952

Option 2 ID : 264330603951

Option 3 ID : 264330603953

Option 4 ID : 264330603954

Status : Answered

Chosen Option : 2

Q.14 A sum of money deposited at simple interest amounts to ₹1,020 in three years and ₹980 in two years. The sum deposited is:

- Ans**
- 1. ₹900
 - 2. ₹880
 - 3. ₹920
 - 4. ₹840

Question ID : 264330158840
Option 1 ID : 264330622721
Option 2 ID : 264330622720
Option 3 ID : 264330622722
Option 4 ID : 264330622719
Status : Answered
Chosen Option : 1

Q.15 A sum of money becomes ₹6,400 in 3 years and ₹8,100 in 5 years on compound interest compounded annually. Find the rate of interest per annum.

- Ans**
- 1. $12\frac{3}{8}\%$
 - 2. $12\frac{4}{8}\%$
 - 3. $12\frac{6}{8}\%$
 - 4. $12\frac{5}{8}\%$

Question ID : 264330156228
Option 1 ID : 264330612311
Option 2 ID : 264330612312
Option 3 ID : 264330612314
Option 4 ID : 264330612313
Status : Not Answered
Chosen Option : --

Q.16 There is a 25 litre mixture of milk and water, containing milk and water in the ratio 3 : 2. Find the number of litres of water that should be added to the mixture so that the resultant mixture has 50% water in it.

- Ans**
- 1. 10
 - 2. 8
 - 3. 5
 - 4. 12

Question ID : 264330155990
Option 1 ID : 264330611362
Option 2 ID : 264330611360
Option 3 ID : 264330611361
Option 4 ID : 264330611359
Status : Answered
Chosen Option : 3

Q.17 Simplify the following:
 $(16\frac{2}{5} - 12\frac{1}{15}) \div 3\frac{4}{81} = ?$

- Ans
- 1. $1\frac{9}{13}$
 - 2. $1\frac{9}{19}$
 - 3. $1\frac{8}{19}$
 - 4. $2\frac{8}{13}$

Question ID : 264330156334
 Option 1 ID : 264330612738
 Option 2 ID : 264330612735
 Option 3 ID : 264330612737
 Option 4 ID : 264330612736
 Status : Answered
 Chosen Option : 3

Q.18 The price of a fan is first decreased by 28% and then increased by 35%. If the resulting price is ₹1,215, find the original price of the fan.

- Ans
- 1. ₹1,250
 - 2. ₹1,520
 - 3. ₹2,150
 - 4. ₹1,052

Question ID : 264330156555
 Option 1 ID : 264330613608
 Option 2 ID : 264330613609
 Option 3 ID : 264330613610
 Option 4 ID : 264330613607
 Status : Answered
 Chosen Option : 3

Q.19 A can do a piece of work in 36 days, while B can do it in 48 days. B worked on it for 12 days and leaves it. How many days will A take to finish the remaining work?

- Ans
- 1. 21
 - 2. 27
 - 3. 28
 - 4. 32

Question ID : 264330154095
 Option 1 ID : 264330603845
 Option 2 ID : 264330603846
 Option 3 ID : 264330603844
 Option 4 ID : 264330603843
 Status : Answered
 Chosen Option : 2

Q.20 A policeman chases a thief who is 630 metres ahead of him. If they run at a speed of 9.5 km per hour and 6.5 km per hour, respectively, then what distance (in km, rounded off to 1 decimal place) does the thief run before he is nabbed by the policeman?

- Ans**
- 1. 1.8
 - 2. 2.0
 - 3. 1.4
 - 4. 1.2

Question ID : **264330156309**
Option 1 ID : **264330612636**
Option 2 ID : **264330612635**
Option 3 ID : **264330612638**
Option 4 ID : **264330612637**
Status : **Answered**
Chosen Option : **3**

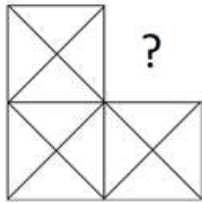
Section : Reasoning Ability and Problem Solving

Q.1 FKQN is related to LQWT in a certain way based on the English alphabetical order. In the same way, CHOJ is related to INUP. To which of the following is DOSG related to, following the same logic?

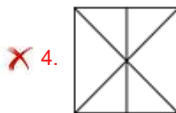
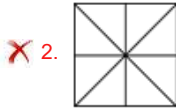
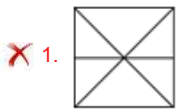
- Ans**
- 1. JSWM
 - 2. JUYM
 - 3. IUVL
 - 4. HQWK

Question ID : **264330151658**
Option 1 ID : **264330594262**
Option 2 ID : **264330594259**
Option 3 ID : **264330594261**
Option 4 ID : **264330594260**
Status : **Answered**
Chosen Option : **2**

Q.2 Identify the figure that completes the pattern (rotation is NOT allowed).



Ans



Question ID : 264330154512

Option 1 ID : 264330605511

Option 2 ID : 264330605512

Option 3 ID : 264330605514

Option 4 ID : 264330605513

Status : Answered

Chosen Option : 3

Q.3 What should come in place of '?' in the given series?

5 11 29 ? 245 731 2189

Ans ✗ 1. 97

✓ 2. 83

✗ 3. 85

✗ 4. 79

Question ID : 264330151491

Option 1 ID : 264330593594

Option 2 ID : 264330593592

Option 3 ID : 264330593593

Option 4 ID : 264330593591

Status : Not Attempted and
Marked For Review

Chosen Option : --

Q.4 What should come in place of '?' in the given series?

25 39 67 123 235 ?

- Ans
- 1. 434
 - 2. 459
 - 3. 378
 - 4. 291

Question ID : 264330151450
 Option 1 ID : 264330593429
 Option 2 ID : 264330593430
 Option 3 ID : 264330593427
 Option 4 ID : 264330593428
 Status : Answered
 Chosen Option : 2

Q.5 What should come in place of '?' in the given series?

7 22 52 112 232 ?

- Ans
- 1. 482
 - 2. 484
 - 3. 462
 - 4. 472

Question ID : 264330151460
 Option 1 ID : 264330593469
 Option 2 ID : 264330593470
 Option 3 ID : 264330593467
 Option 4 ID : 264330593468
 Status : Answered
 Chosen Option : 4

Q.6 Read the given statements and conclusions carefully. You have to take the given statements to be true even if they seem to be at variance from commonly known facts. You have to decide which conclusion/s logically follow/s from the given statements.

Statements: All TVs are radios. Some radios are dryers. All dryers are hot.

Conclusion I: Some TVs are radios.

Conclusion II: Some dryers are TVs.

- Ans
- 1. Neither conclusion (I) nor (II) is follow.
 - 2. Both conclusions (I) and (II) are follow.
 - 3. Only conclusion (I) is follow.
 - 4. Only conclusion (II) is follow.

Question ID : 264330155913
 Option 1 ID : 264330611057
 Option 2 ID : 264330611058
 Option 3 ID : 264330611055
 Option 4 ID : 264330611056
 Status : Answered
 Chosen Option : 3

Q.7 F, G, H, I, J, K, L and M are sitting around a square table facing the centre. Some of them are sitting at the corners of the table while some are sitting at the exact centre of the sides. G, I, H, and J are not sitting in any of the corners. G is sitting to the immediate left of K and immediate right of L. I is sitting to the immediate right of K. F is sitting to the immediate right of I and immediate left of H. J is sitting to the immediate right of M and immediate left of L. Who is sitting to the immediate left of M?

- Ans**
- 1. I
 - 2. H
 - 3. J
 - 4. G

Question ID : 264330155872
 Option 1 ID : 264330610891
 Option 2 ID : 264330610892
 Option 3 ID : 264330610894
 Option 4 ID : 264330610893
 Status : Answered
 Chosen Option : 2

Q.8 Read the given statements and conclusions carefully. You have to take the given statements to be true even if they seem to be at variance from commonly known facts. You have to decide which conclusion/s logically follow/s from the given statements.

Statements: Some cows are animals. All animals are big. No big is a mobile.

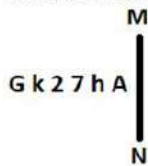
Conclusion I: All cows are animals.

Conclusion II: No big is an animal.

- Ans**
- 1. Only conclusion (I) is follow.
 - 2. Neither conclusion (I) nor (II) is follow.
 - 3. Both conclusions (I) and (II) are follow.
 - 4. Only conclusion (II) is follow.

Question ID : 264330155891
 Option 1 ID : 264330610967
 Option 2 ID : 264330610969
 Option 3 ID : 264330610970
 Option 4 ID : 264330610968
 Status : Answered
 Chosen Option : 2

Q.9 Select the correct mirror image of the given figure when the mirror is placed at MN as shown below.



- Ans**
- 1. A h 7 2 k G
 - 2. A h 7 2 k G
 - 3. A h 2 7 k G
 - 4. A h 2 7 k G

Question ID : 264330151521
 Option 1 ID : 264330593714
 Option 2 ID : 264330593711
 Option 3 ID : 264330593713
 Option 4 ID : 264330593712
 Status : Answered
 Chosen Option : 1

Q.10 In a certain code language, 'ESCORT' is coded as 'GRBNQV' and 'APRON' is coded as 'COQNP'. What is the code for 'CRANKY' in the given code language?

- Ans**
- 1. FPZKNC
 - 2. DQYNKB
 - 3. DPANJB
 - 4. EQZMJA

Question ID : 264330155830

Option 1 ID : 264330610726

Option 2 ID : 264330610723

Option 3 ID : 264330610724

Option 4 ID : 264330610725

Status : Answered

Chosen Option : 4

Q.11 What should come in place of ? in the given series based on the English alphabetical order?

QDS, NET, KFU, HGV, ?

- Ans**
- 1. FGV
 - 2. FHU
 - 3. EHW
 - 4. GHU

Question ID : 264330155795

Option 1 ID : 264330610584

Option 2 ID : 264330610585

Option 3 ID : 264330610583

Option 4 ID : 264330610586

Status : Answered

Chosen Option : 3

Q.12 What will come in place of '?' in the following equation, if '+' and '×' are interchanged and '-' and '÷' are interchanged?

$14 + 5 + 2 - 1 \times 3 = ?$

- Ans**
- 1. 23
 - 2. 16
 - 3. 17
 - 4. 71

Question ID : 264330154665

Option 1 ID : 264330606124

Option 2 ID : 264330606125

Option 3 ID : 264330606123

Option 4 ID : 264330606126

Status : Answered

Chosen Option : 4

Q.13 In a certain code language, 'BATH' is coded as '1482' and 'HALT' is coded as '8126'. What is the code for 'L' in the given code language?

- Ans**
- 1. 1
 - 2. 8
 - 3. 2
 - 4. 6

Question ID : 264330151712
Option 1 ID : 264330594477
Option 2 ID : 264330594478
Option 3 ID : 264330594475
Option 4 ID : 264330594476
Status : Answered
Chosen Option : 4

Q.14 If 2nd Oct 2003 is Thursday, then what will be the day of the week on 15th July 2010?

- Ans**
- 1. Monday
 - 2. Friday
 - 3. Thursday
 - 4. Tuesday

Question ID : 264330154334
Option 1 ID : 264330604801
Option 2 ID : 264330604800
Option 3 ID : 264330604802
Option 4 ID : 264330604799
Status : Not Answered
Chosen Option : --

Q.15 Select the combination of letters that when sequentially placed in the blanks of the given series, will complete the series.

HI _ H _ _ HI _ _ IH

- Ans**
- 1. HIHHH
 - 2. HIIHI
 - 3. IIIHI
 - 4. IHHIH

Question ID : 264330151646
Option 1 ID : 264330594211
Option 2 ID : 264330594213
Option 3 ID : 264330594212
Option 4 ID : 264330594214
Status : Answered
Chosen Option : 1

Q.16 284 is related to 142 following a certain logic. Following the same logic, 612 is related to 306. To which of the following is 522 related to, following the same logic?

- Ans**
- 1. 262
 - 2. 261
 - 3. 263
 - 4. 264

Question ID : 264330151583
 Option 1 ID : 264330593960
 Option 2 ID : 264330593959
 Option 3 ID : 264330593961
 Option 4 ID : 264330593962
 Status : Answered
 Chosen Option : 2

Q.17 In the following number-pairs, the second number is obtained by applying certain mathematical operations to the first number. Select the set in which the numbers are related in the same way as are the numbers of the following sets.

(NOTE: Operations should be performed on the whole numbers, without breaking down the numbers into its constituent digits. E.g. 13 – Operations on 13 such as adding / subtracting /multiplying etc. to 13 can be performed. Breaking down 13 into 1 and 3 and then performing mathematical operations on 1 and 3 is not allowed)

5, 24
 12, 143

- Ans**
- 1. 27, 345
 - 2. 14, 195
 - 3. 18, 652
 - 4. 21, 126

Question ID : 264330151623
 Option 1 ID : 264330594120
 Option 2 ID : 264330594119
 Option 3 ID : 264330594122
 Option 4 ID : 264330594121
 Status : Answered
 Chosen Option : 2

Q.18 If G means '-', C means '×', D means '+', B means '+', then what will come in place of the question mark (?) in the following equation?

49 G 69 D 3 B 12 C 5 = ?

- Ans**
- 1. 64
 - 2. 13
 - 3. 37
 - 4. 86

Question ID : 264330154686
 Option 1 ID : 264330606209
 Option 2 ID : 264330606207
 Option 3 ID : 264330606208
 Option 4 ID : 264330606210
 Status : Answered
 Chosen Option : 4

Q.19 What should come in place of ? in the given series based on the English alphabetical order?

SIY, VHA, YGC, BFE, ?

- Ans
- 1. DEG
 - 2. FEH
 - 3. EEG
 - 4. DFH

Question ID : 264330155800
 Option 1 ID : 264330610604
 Option 2 ID : 264330610603
 Option 3 ID : 264330610606
 Option 4 ID : 264330610605
 Status : Answered
 Chosen Option : 3

Q.20 Which figure should replace the question mark (?) if the following figure series were to be continued?

↑	W	S	T	
W O R S	T ↑	T W 8 R	7 S	?
S 8 8	R R	↑ ↑	8	

Ans

- 1.

	R	
7	T	8
S		↑
- 2.

	7	
T	R	↑
8		S
- 3.

	R	
7	T	↑
8		S
- 4.

	7	
T	R	8
S		↑

Question ID : 264330154741
 Option 1 ID : 264330606428
 Option 2 ID : 264330606427
 Option 3 ID : 264330606430
 Option 4 ID : 264330606429
 Status : Answered
 Chosen Option : 1

Q.1 In which of the following states is there hardly any differences in day and night temperatures?

- Ans**
- 1. Rajasthan
 - 2. Bihar
 - 3. Kerala
 - 4. Punjab

Question ID : 264330160148
Option 1 ID : 264330627932
Option 2 ID : 264330627934
Option 3 ID : 264330627931
Option 4 ID : 264330627933
Status : Answered
Chosen Option : 3

Q.2 For which dance form did Vasundhara Doraswamy get Sangeet Natak Akademi Award (Akademi Puraskar) for the year 2019?

- Ans**
- 1. Mohiniyattam
 - 2. Kathakali
 - 3. Bharatanatyam
 - 4. Kathak

Question ID : 264330155480
Option 1 ID : 264330609326
Option 2 ID : 264330609325
Option 3 ID : 264330609323
Option 4 ID : 264330609324
Status : Answered
Chosen Option : 1

Q.3 The dancers Padma Subrahmanyam, Alarmel Valli, Yamini Krishnamurthy and Anita Ratnam are great exponents of _____.

- Ans**
- 1. Mohiniyattam
 - 2. Odissi
 - 3. Bharatanatyam
 - 4. Kathak

Question ID : 264330160807
Option 1 ID : 264330630561
Option 2 ID : 264330630559
Option 3 ID : 264330630562
Option 4 ID : 264330630560
Status : Answered
Chosen Option : 3

Q.4 Which of the following states won the Santosh Trophy in Riyadh in March 2023 after a gap of 54 years?

- Ans** 1. Karnataka
 2. Tamil Nadu
 3. Maharashtra
 4. Andhra Pradesh

Question ID : 264330161441
Option 1 ID : 264330633091
Option 2 ID : 264330633092
Option 3 ID : 264330633094
Option 4 ID : 264330633093
Status : Not Answered
Chosen Option : --

Q.5 Which of the following statements is correct about Article 129 of the Constitution of India?

- Ans** 1. It provides for the Supreme Court to give advisory opinion to the President.
 2. It provides for the Supreme Court to be a court of original jurisdiction
 3. It provides for the Supreme Court to be a court of record.
 4. It provides for the Supreme Court to be the highest court of appeal.

Question ID : 264330161291
Option 1 ID : 264330632491
Option 2 ID : 264330632493
Option 3 ID : 264330632494
Option 4 ID : 264330632492
Status : Answered
Chosen Option : 3

Q.6 Indian classical vocalist Pandit Jasraj belonged to which of the following musical gharanas?

- Ans** 1. Patiala Gharana
 2. Dagari Gharana
 3. Gwalior Gharana
 4. Mewati Gharana

Question ID : 264330161768
Option 1 ID : 264330634402
Option 2 ID : 264330634400
Option 3 ID : 264330634401
Option 4 ID : 264330634399
Status : Answered
Chosen Option : 3

Q.7 Articles 29-30 of the Constitution of India deals with _____

- Ans** 1. Cultural and educational rights
 2. Right to freedom
 3. Right to equality
 4. Right to freedom of religion

Question ID : 264330159902
Option 1 ID : 264330626958
Option 2 ID : 264330626956
Option 3 ID : 264330626955
Option 4 ID : 264330626957
Status : Answered
Chosen Option : 1

Q.8 As per the 18th Periodic Labour Force Survey (PLFS), the unemployment rate among females (aged 15 years and above) in urban areas declined to _____ in January-March 2023.

- Ans 1. 9.7%
2. 9.2%
3. 7.8%
4. 8.2%

Question ID : 264330166023
Option 1 ID : 264330651170
Option 2 ID : 264330651169
Option 3 ID : 264330651167
Option 4 ID : 264330651168
Status : Not Answered
Chosen Option : --

Q.9 Which of the following is connected with daily atmospheric weather changes?

- Ans 1. Asthenosphere
2. Stratopause
3. Troposphere
4. Lithosphere

Question ID : 264330161312
Option 1 ID : 264330632578
Option 2 ID : 264330632575
Option 3 ID : 264330632576
Option 4 ID : 264330632577
Status : Answered
Chosen Option : 3

Q.10 According to the Census of India 2011, which of the following states has the lowest literacy rate?

- Ans 1. Kerala
2. Tripura
3. Goa
4. Mizoram

Question ID : 264330160162
Option 1 ID : 264330627990
Option 2 ID : 264330627988
Option 3 ID : 264330627989
Option 4 ID : 264330627987
Status : Answered
Chosen Option : 4

Q.11 In which state is the famous Brihadeshwar temple situated?

- Ans 1. Kerala
2. Karnataka
3. Tamil Nadu
4. Andhra Pradesh

Question ID : 264330160784
Option 1 ID : 264330630468
Option 2 ID : 264330630469
Option 3 ID : 264330630467
Option 4 ID : 264330630470
Status : Answered
Chosen Option : 2

Q.12 In which year did Robert Hooke introduce the term 'cell'?

- Ans
- 1. 1875
 - 2. 1675
 - 3. 1665
 - 4. 1765

Question ID : 264330157811
Option 1 ID : 264330618606
Option 2 ID : 264330618604
Option 3 ID : 264330618603
Option 4 ID : 264330618605
Status : Answered
Chosen Option : 1

Q.13 Which of the following is an example of capital receipt in the government budget?

- Ans
- 1. Sale of government bonds
 - 2. Income from government-owned enterprises
 - 3. Tax revenue collected from citizens
 - 4. Grants received from foreign countries

Question ID : 264330157278
Option 1 ID : 264330616477
Option 2 ID : 264330616478
Option 3 ID : 264330616475
Option 4 ID : 264330616476
Status : Answered
Chosen Option : 3

Q.14 Which of the abhinayas deals with the use of costumes, jewellery, facial make-up etc?

- Ans
- 1. Vachika Abhinaya
 - 2. Aharya Abhinaya
 - 3. Sattvika Abhinaya
 - 4. Angika Abhinaya

Question ID : 264330159052
Option 1 ID : 264330623568
Option 2 ID : 264330623567
Option 3 ID : 264330623570
Option 4 ID : 264330623569
Status : Not Answered
Chosen Option : --

Q.15 Pandit Bhajan Sopori, who died in the year 2022, was a famous player of which musical instrument?

- Ans
- 1. Ravan Hatta
 - 2. Tabla
 - 3. Sitar
 - 4. Santoor

Question ID : 264330155510
Option 1 ID : 264330609445
Option 2 ID : 264330609443
Option 3 ID : 264330609446
Option 4 ID : 264330609444
Status : Answered
Chosen Option : 4

Q.16 Which of the following best defines transfer payments?

- Ans 1. Payments made to individuals in exchange for their labour or services
2. Payments made by the government to individuals without any corresponding production of goods or services
3. Payments made by businesses to their shareholders as a share of profits
4. Payments made by individuals to the government in the form of taxes

Question ID : 264330157317
Option 1 ID : 264330616631
Option 2 ID : 264330616632
Option 3 ID : 264330616633
Option 4 ID : 264330616634
Status : Answered
Chosen Option : 1

Q.17 Who among the following is the author of the book 'Red Earth and Pouring Rain: A Novel'?

- Ans 1. Vikram Chandra
2. Shashi Tharoor
3. Ashwin Sanghi
4. Ruskin Bond

Question ID : 264330155455
Option 1 ID : 264330609224
Option 2 ID : 264330609223
Option 3 ID : 264330609225
Option 4 ID : 264330609226
Status : Not Answered
Chosen Option : --

Q.18 The Nuakhai festival of _____ is observed on Panchami Tithi (fifth day) of the lunar fortnight of Bhadrava (August-September), the day after Ganesh Chaturthi.

- Ans 1. Odisha
2. Assam
3. Meghalaya
4. West Bengal

Question ID : 264330160815
Option 1 ID : 264330630594
Option 2 ID : 264330630591
Option 3 ID : 264330630593
Option 4 ID : 264330630592
Status : Answered
Chosen Option : 1

Q.19 Which country is hosting the ICC 2023 ODI Cricket World Cup?

- Ans 1. Pakistan
2. South Africa
3. India
4. Australia

Question ID : 264330158222
Option 1 ID : 264330620248
Option 2 ID : 264330620250
Option 3 ID : 264330620247
Option 4 ID : 264330620249
Status : Answered
Chosen Option : 3

Q.20 Which of the following is an autobiography of Sachin Tendulkar?

- Ans
- 1. Unbreakable
 - 2. Playing It My Way
 - 3. My Many Trysts with God
 - 4. I Am No Messiah

Question ID : 264330155495
Option 1 ID : 264330609386
Option 2 ID : 264330609385
Option 3 ID : 264330609383
Option 4 ID : 264330609384
Status : Answered
Chosen Option : 2

Q.21 In April 2023, Tamil Nadu passed a bill banning which of the following?

- Ans
- 1. Gutka
 - 2. Online Gambling
 - 3. Lottery
 - 4. Liquor

Question ID : 264330158336
Option 1 ID : 264330620706
Option 2 ID : 264330620704
Option 3 ID : 264330620703
Option 4 ID : 264330620705
Status : Not Answered
Chosen Option : --

Q.22 In which stadium was the final match of ODI Cricket World Cup 2011 played?

- Ans
- 1. Eden Gardens
 - 2. Wankhede Stadium
 - 3. Feroz Shah Kotla Stadium
 - 4. D Y Patil Stadium

Question ID : 264330158231
Option 1 ID : 264330620285
Option 2 ID : 264330620283
Option 3 ID : 264330620286
Option 4 ID : 264330620284
Status : Answered
Chosen Option : 2

Q.23 'Mitra Mela' was a revolutionary organisation founded by:

- Ans
- 1. Bhupendra Nath Bose
 - 2. Khudiram Bose
 - 3. Vinayak Savarkar
 - 4. Sisir Kumar Bose

Question ID : 264330162334
Option 1 ID : 264330636664
Option 2 ID : 264330636666
Option 3 ID : 264330636663
Option 4 ID : 264330636665
Status : Not Answered
Chosen Option : --

Q.24 Which is the Gaussian unit of kinematic viscosity?

- Ans
- 1. Ampere
 - 2. Joule
 - 3. Stokes
 - 4. Darcy

Question ID : 264330157785
Option 1 ID : 264330618500
Option 2 ID : 264330618502
Option 3 ID : 264330618501
Option 4 ID : 264330618499
Status : Answered
Chosen Option : 4

Q.25 Who among the following freedom fighter lawyers from Bengal is known as Deshbandhu?

- Ans
- 1. Chittaranjan Das
 - 2. Durga Mohan Das
 - 3. Bipin Chandra Pal
 - 4. Satish Ranjan Das

Question ID : 264330160889
Option 1 ID : 264330630890
Option 2 ID : 264330630888
Option 3 ID : 264330630887
Option 4 ID : 264330630889
Status : Answered
Chosen Option : 1

Section : English Language and Comprehension

Q.1 Select the option that can be used as a one-word substitute for the underlined group of words.

He studies the subject known as the scientific study of insects.

- Ans
- 1. Entomology
 - 2. Alchemy
 - 3. Biology
 - 4. Etymology

Question ID : 264330153513
Option 1 ID : 264330601563
Option 2 ID : 264330601566
Option 3 ID : 264330601565
Option 4 ID : 264330601564
Status : Answered
Chosen Option : 1

Q.2 The following sentence has been split into four segments. Identify the segment that contains an error.

Harish told me / in the morning / that Gaurav will / come tomorrow.

- Ans
- 1. come tomorrow
 - 2. Harish told me
 - 3. that Gaurav will
 - 4. in the morning

Question ID : 264330155324
Option 1 ID : 264330608738
Option 2 ID : 264330608735
Option 3 ID : 264330608737
Option 4 ID : 264330608736
Status : Answered
Chosen Option : 1

Q.3 Identify the INCORRECTLY spelt word in the following sentence.

The detective and his agent inspected the krime scene yesterday.

- Ans
- 1. krime
 - 2. yesterday
 - 3. agent
 - 4. detective

Question ID : 264330152601
Option 1 ID : 264330598009
Option 2 ID : 264330598010
Option 3 ID : 264330598008
Option 4 ID : 264330598007
Status : Answered
Chosen Option : 1

Q.4 Select the most appropriate meaning of the given idiom.

Cup of tea

- Ans
- 1. Long held desire
 - 2. A cup brimming with tea
 - 3. Favourite pastime
 - 4. Something one likes/excels in

Question ID : 264330159725
Option 1 ID : 264330626257
Option 2 ID : 264330626256
Option 3 ID : 264330626258
Option 4 ID : 264330626255
Status : Answered
Chosen Option : 4

Q.5 Select the most appropriate segment that can substitute the underlined word in the following sentence.

Iraq was governed by autocracy when Saddam Hussain was the President.

Ans ✓ 1. one man with absolute power

✗ 2. the King and his heir

✗ 3. the wealthy class

✗ 4. the common people

Question ID : 264330152630

Option 1 ID : 264330598126

Option 2 ID : 264330598124

Option 3 ID : 264330598125

Option 4 ID : 264330598123

Status : Answered

Chosen Option : 1

Q.6 Select the most appropriate option to fill in the blank.

Ours is _____ house of all the houses in our area.

Ans ✗ 1. the more bigger

✓ 2. the biggest

✗ 3. the most biggest

✗ 4. the bigger

Question ID : 264330152733

Option 1 ID : 264330598534

Option 2 ID : 264330598531

Option 3 ID : 264330598533

Option 4 ID : 264330598532

Status : Answered

Chosen Option : 2

Q.7 Select the INCORRECTLY spelt word.

Ans ✓ 1. Tastimonial

✗ 2. Ballad

✗ 3. Rampant

✗ 4. Beneficiary

Question ID : 264330152783

Option 1 ID : 264330598724

Option 2 ID : 264330598723

Option 3 ID : 264330598725

Option 4 ID : 264330598726

Status : Answered

Chosen Option : 1

Q.8 Select the most appropriate meaning of the underlined idiom.

The council president is known to play devil's advocate often.

- Ans
- 1. To allow others to rise
 - 2. To play risky games
 - 3. To argue, just for the sake of it
 - 4. Make one's own destiny

Question ID : 264330153148
Option 1 ID : 264330600152
Option 2 ID : 264330600151
Option 3 ID : 264330600153
Option 4 ID : 264330600154
Status : Answered
Chosen Option : 3

Q.9 Select the most appropriate meaning of the underlined segment in the given sentence.

When it comes to playing the guitar, Jim always hits the nail on the head.

- Ans
- 1. Is dishonest
 - 2. Misses the point
 - 3. Does something right
 - 4. Makes a mistake

Question ID : 264330152924
Option 1 ID : 264330599278
Option 2 ID : 264330599275
Option 3 ID : 264330599277
Option 4 ID : 264330599276
Status : Answered
Chosen Option : 3

Q.10 Select the INCORRECTLY spelt word.

- Ans
- 1. Rhyme
 - 2. Relevant
 - 3. Succesful
 - 4. Queue

Question ID : 264330153152
Option 1 ID : 264330600169
Option 2 ID : 264330600168
Option 3 ID : 264330600170
Option 4 ID : 264330600167
Status : Answered
Chosen Option : 3

Q.11 Select the most appropriate meaning of the underlined idiom.

The company was on thin ice.

- Ans
- 1. In a situation of comfort
 - 2. Forcing itself to collaborate
 - 3. Depending on business competitors
 - 4. In a precarious or risky situation

Question ID : 264330153145
Option 1 ID : 264330600139
Option 2 ID : 264330600141
Option 3 ID : 264330600142
Option 4 ID : 264330600140
Status : Answered
Chosen Option : 4

Q.12 The following sentence has been split into four segments. Identify the segment that contains a grammatical error.
She performed / the dance routine / perfect, / impressing everyone.

- Ans
- 1. She performed
 - 2. perfect
 - 3. impressing everyone
 - 4. the dance routine

Question ID : 264330153182
Option 1 ID : 264330600287
Option 2 ID : 264330600289
Option 3 ID : 264330600290
Option 4 ID : 264330600288
Status : Answered
Chosen Option : 2

Q.13 Select the option that will improve the underlined part of the given sentence. In case no improvement is needed, select 'No improvement required'.

With all their little comforts destroyed, the survivors were thrown still farther back into barbarism.

- Ans
- 1. still further back for barbarism
 - 2. still further back into barbarism
 - 3. No improvement required
 - 4. still a little farther into barbarism

Question ID : 264330153611
Option 1 ID : 264330601927
Option 2 ID : 264330601929
Option 3 ID : 264330601930
Option 4 ID : 264330601928
Status : Answered
Chosen Option : 2

Q.14 Parts of the following sentence have been given as options. Select the option that contains an error.

Perhaps my family visit the Taj Mahal next month.

- Ans
- 1. next month
 - 2. Perhaps
 - 3. the Taj Mahal
 - 4. my family visit

Question ID : 264330152814

Option 1 ID : 264330598850

Option 2 ID : 264330598847

Option 3 ID : 264330598849

Option 4 ID : 264330598848

Status : Answered

Chosen Option : 4

Q.15 The following sentence has been split into four segments. Identify the segment that contains a grammatical error.

In America, / most of the people / can speak / the English well.

- Ans
- 1. the English well
 - 2. most of the people
 - 3. can speak
 - 4. In America,

Question ID : 264330153164

Option 1 ID : 264330600218

Option 2 ID : 264330600216

Option 3 ID : 264330600217

Option 4 ID : 264330600215

Status : Answered

Chosen Option : 1

Q.16 Select the most appropriate ANTONYM of the underlined word.

Butterfly was attracted towards the bright flowers.

- Ans
- 1. Reckoned
 - 2. Repulsed
 - 3. Reargued
 - 4. Recurred

Question ID : 264330151818

Option 1 ID : 264330594900

Option 2 ID : 264330594902

Option 3 ID : 264330594899

Option 4 ID : 264330594901

Status : Answered

Chosen Option : 2

Q.17 The following sentence has been split into four segments. Identify the segment that contains a grammatical error.

Please / explain me / how this plan / did not work.

- Ans
- 1. did not work
 - 2. Please
 - 3. how this plan
 - 4. explain me

Question ID : 264330153419
Option 1 ID : 264330601210
Option 2 ID : 264330601207
Option 3 ID : 264330601209
Option 4 ID : 264330601208
Status : Answered
Chosen Option : 1

Q.18 Select the most appropriate option to fill in the blank.

Early childhood experiences have a _____ impact on brain development affecting learning, health, behaviour, and, ultimately, productivity and income.

- Ans
- 1. perfect
 - 2. profound
 - 3. basic
 - 4. superficial

Question ID : 264330151902
Option 1 ID : 264330595225
Option 2 ID : 264330595224
Option 3 ID : 264330595226
Option 4 ID : 264330595223
Status : Answered
Chosen Option : 2

Q.19 Select the most appropriate synonym of the given word.

Fragile

- Ans
- 1. Brittle
 - 2. Sturdy
 - 3. Unkempt
 - 4. Intense

Question ID : 264330151881
Option 1 ID : 264330595144
Option 2 ID : 264330595146
Option 3 ID : 264330595143
Option 4 ID : 264330595145
Status : Answered
Chosen Option : 1

Q.20 Select the most appropriate ANTONYM of the underlined word.
He was admired for introducing welfare programmes.

- Ans**
- 1. Despised
 - 2. Confessed
 - 3. Appreciated
 - 4. Succeeded

Question ID : 264330151815
Option 1 ID : 264330594889
Option 2 ID : 264330594887
Option 3 ID : 264330594888
Option 4 ID : 264330594890
Status : Answered
Chosen Option : 1

Comprehension:

In the following passage, some words have been deleted. Read the passage carefully and select the most appropriate option to fill in each blank.

Fingerprinting is the one of the methods of (1)_____ using the impression made by the minute ridge formation or patterns found on the fingertips. No two persons have exactly the same (2)_____ of ridge patterns, they remain unchanged throughout the life. Fingerprints may be classified and filled on the basis of the ridge patterns, setting up an identification system that is almost (3)_____. Today, law enforcement agencies use computers to (4)_____ record fingerprints and to transmit them electronically to other agencies for comparison. By comparing fingerprints of the criminals with the recorded fingerprints, officials can establish (5)_____ proof of the presence or identity of a person.

SubQuestion No : 21

Q.21 Select the most appropriate option to fill in blank number 1.

- Ans**
- 1. involvement
 - 2. satisfaction
 - 3. demonstration
 - 4. identification

Question ID : 264330152908
Option 1 ID : 264330599218
Option 2 ID : 264330599215
Option 3 ID : 264330599217
Option 4 ID : 264330599216
Status : Answered
Chosen Option : 4

Comprehension:

In the following passage, some words have been deleted. Read the passage carefully and select the most appropriate option to fill in each blank.

Fingerprinting is the one of the methods of (1)_____ using the impression made by the minute ridge formation or patterns found on the fingertips. No two persons have exactly the same (2)_____ of ridge patterns, they remain unchanged throughout the life. Fingerprints may be classified and filled on the basis of the ridge patterns, setting up an identification system that is almost (3)_____. Today, law enforcement agencies use computers to (4)_____ record fingerprints and to transmit them electronically to other agencies for comparison. By comparing fingerprints of the criminals with the recorded fingerprints, officials can establish (5)_____ proof of the presence or identity of a person.

SubQuestion No : 22

Q.22 Select the most appropriate option to fill in blank number 2.

Ans ✓ 1. arrangement

✗ 2. statement

✗ 3. management

✗ 4. settlement

Question ID : 264330152909

Option 1 ID : 264330599219

Option 2 ID : 264330599222

Option 3 ID : 264330599220

Option 4 ID : 264330599221

Status : Answered

Chosen Option : 1

Comprehension:

In the following passage, some words have been deleted. Read the passage carefully and select the most appropriate option to fill in each blank.

Fingerprinting is the one of the methods of (1)_____ using the impression made by the minute ridge formation or patterns found on the fingertips. No two persons have exactly the same (2)_____ of ridge patterns, they remain unchanged throughout the life. Fingerprints may be classified and filled on the basis of the ridge patterns, setting up an identification system that is almost (3)_____. Today, law enforcement agencies use computers to (4)_____ record fingerprints and to transmit them electronically to other agencies for comparison. By comparing fingerprints of the criminals with the recorded fingerprints, officials can establish (5)_____ proof of the presence or identity of a person.

SubQuestion No : 23

Q.23 Select the most appropriate option to fill in blank number 3.

Ans ✗ 1. risky

✓ 2. infallible

✗ 3. unreliable

✗ 4. fallible

Question ID : 264330152910

Option 1 ID : 264330599226

Option 2 ID : 264330599225

Option 3 ID : 264330599223

Option 4 ID : 264330599224

Status : Answered

Chosen Option : 2

Comprehension:

In the following passage, some words have been deleted. Read the passage carefully and select the most appropriate option to fill in each blank.

Fingerprinting is the one of the methods of (1)_____ using the impression made by the minute ridge formation or patterns found on the fingertips. No two persons have exactly the same (2)_____ of ridge patterns, they remain unchanged throughout the life. Fingerprints may be classified and filled on the basis of the ridge patterns, setting up an identification system that is almost (3)_____. Today, law enforcement agencies use computers to (4)_____ record fingerprints and to transmit them electronically to other agencies for comparison. By comparing fingerprints of the criminals with the recorded fingerprints, officials can establish (5)_____ proof of the presence or identity of a person.

SubQuestion No : 24

Q.24 Select the most appropriate option to fill in blank number 4.

- Ans 1. manually
 2. digitally
 3. mentally
 4. physically

Question ID : 264330152911

Option 1 ID : 264330599227

Option 2 ID : 264330599228

Option 3 ID : 264330599230

Option 4 ID : 264330599229

Status : Answered

Chosen Option : 2

Comprehension:

In the following passage, some words have been deleted. Read the passage carefully and select the most appropriate option to fill in each blank.

Fingerprinting is the one of the methods of (1)_____ using the impression made by the minute ridge formation or patterns found on the fingertips. No two persons have exactly the same (2)_____ of ridge patterns, they remain unchanged throughout the life. Fingerprints may be classified and filled on the basis of the ridge patterns, setting up an identification system that is almost (3)_____. Today, law enforcement agencies use computers to (4)_____ record fingerprints and to transmit them electronically to other agencies for comparison. By comparing fingerprints of the criminals with the recorded fingerprints, officials can establish (5)_____ proof of the presence or identity of a person.

SubQuestion No : 25

Q.25 Select the most appropriate option to fill in blank number 5.

- Ans 1. absolute
 2. doubt
 3. unconfirmed
 4. provisional

Question ID : 264330152912

Option 1 ID : 264330599234

Option 2 ID : 264330599231

Option 3 ID : 264330599233

Option 4 ID : 264330599232

Status : Answered

Chosen Option : 1

SSC MTS 2023 Tier 1 Sept 1 Shift 3 Question Paper with Answers

Roll Number	
Candidate Name	
Exam Date	01/09/2023
Exam Time	4:00 PM - 6:00 PM
Subject	MTS Non Tech Havaladar CBIC and CBN Examination 2023

Section : Numerical and Mathematical Ability

Q.1 The surface area of a sphere is 5544 cm^2 . If the radius of the sphere is doubled, then find the surface area of the new sphere (in cm^2).

- Ans** 1. 22,176
 2. 22,761
 3. 20,761
 4. 20,176

Question ID : 264330156018
Option 1 ID : 264330611474
Option 2 ID : 264330611472
Option 3 ID : 264330611471
Option 4 ID : 264330611473
Status : Answered
Chosen Option : 1

Q.2 A sailor rows a boat 36 km downstream and 24 km upstream in 6 hours. When it rows 24 km downstream and 36 km upstream the sailor takes 6 and half hours. Then the speed of the current is:

- Ans** 1. 1.5 km/h
 2. 4 km/h
 3. 3 km/h
 4. 2 km/h

Question ID : 264330154057
Option 1 ID : 264330603692
Option 2 ID : 264330603694
Option 3 ID : 264330603693
Option 4 ID : 264330603691
Status : Answered
Chosen Option : 4

Q.3 From a cuboid of dimension of $8 \times 6 \times 6$ units, small cubes of dimension $0.5 \times 0.5 \times 0.5$ unit are cut. How many small cubes can be cut from the big cuboid?

- Ans**
- 1. 576
 - 2. 1152
 - 3. 2304
 - 4. 1552

Question ID : 264330153826
 Option 1 ID : 264330602768
 Option 2 ID : 264330602769
 Option 3 ID : 264330602767
 Option 4 ID : 264330602770
 Status : Answered
 Chosen Option : 3

Q.4 The following table shows the number of students enrolled in a university for higher education in Liberal Arts and in Engineering from 2015 to 2018. Study the table carefully and answer the question that follows.

Year	No. of students	
	Liberal Arts	Engineering
2015	345	650
2016	549	521
2017	477	846
2018	781	695

The average number of students enrolled per year in Liberal Arts is how much more or less than that in Engineering from 2015 to 2018?

- Ans**
- 1. Less, 140
 - 2. Less, 127
 - 3. More, 140
 - 4. More, 127

Question ID : 264330156496
 Option 1 ID : 264330613371
 Option 2 ID : 264330613373
 Option 3 ID : 264330613372
 Option 4 ID : 264330613374
 Status : Answered
 Chosen Option : 1

Q.5 Find the greatest two digit number which on dividing 219, 365, 511 leaves the remainders 3, 5, 7, respectively.

- Ans**
- 1. 63
 - 2. 82
 - 3. 53
 - 4. 72

Question ID : 264330155983
 Option 1 ID : 264330611332
 Option 2 ID : 264330611331
 Option 3 ID : 264330611333
 Option 4 ID : 264330611334
 Status : Answered
 Chosen Option : 4

Q.6 From a container having pure milk, 35% is replaced by water and the process is repeated thrice. At the end of the third operation, the purity of the milk is:

- Ans**
- 1. $21\frac{23}{80}\%$
 - 2. $37\frac{21}{80}\%$
 - 3. $23\frac{37}{80}\%$
 - 4. $27\frac{37}{80}\%$

Question ID : 264330154077

Option 1 ID : 264330603771

Option 2 ID : 264330603773

Option 3 ID : 264330603774

Option 4 ID : 264330603772

Status : Answered

Chosen Option : 3

Q.7 The difference in interests earned on ₹1,50,000 at an 8% rate of interest per annum in a year when the interest is compounded semi-annually and annually, respectively, is ₹_____.

- Ans**
- 1. 360
 - 2. 120
 - 3. 240
 - 4. 420

Question ID : 264330153811

Option 1 ID : 264330602708

Option 2 ID : 264330602709

Option 3 ID : 264330602710

Option 4 ID : 264330602707

Status : Answered

Chosen Option : 3

Q.8 If ₹3,650 amounts to ₹4,526 in 3 years at simple interest, what is the rate of interest per annum?

- Ans**
- 1. 8%
 - 2. 10%
 - 3. 12%
 - 4. 6%

Question ID : 264330156483

Option 1 ID : 264330613321

Option 2 ID : 264330613322

Option 3 ID : 264330613320

Option 4 ID : 264330613319

Status : Answered

Chosen Option : 1

Q.9 The percentage profit earned by selling an article for ₹1,980 is equal to the percentage loss incurred by selling the same article for ₹1,620. At what price should the article be sold to make a 15% profit?

- Ans
- 1. ₹1,863
 - 2. ₹2,277
 - 3. ₹2,070
 - 4. ₹1,800

Question ID : 264330161979

Option 1 ID : 264330635245

Option 2 ID : 264330635244

Option 3 ID : 264330635243

Option 4 ID : 264330635246

Status : Answered

Chosen Option : 3

Q.10 A man travels from point A to point B at a speed of 40 km/h and returns to point A at a speed of 60 km/h. If the total time taken for the journey is 5 hours, what is the distance between point A and point B?

- Ans
- 1. 135 km
 - 2. 120 km
 - 3. 125 km
 - 4. 130 km

Question ID : 264330156273

Option 1 ID : 264330612494

Option 2 ID : 264330612491

Option 3 ID : 264330612492

Option 4 ID : 264330612493

Status : Answered

Chosen Option : 2

Q.11 Swati starts a business with ₹4,200, and after 5 months, Bani joins Swati as her partner. After a year, the profit is divided among Swati and Bani in the ratio 2 : 5. What is Bani's contribution?

- Ans
- 1. ₹18,000
 - 2. ₹17,050
 - 3. ₹19,000
 - 4. ₹16,500

Question ID : 264330156186

Option 1 ID : 264330612144

Option 2 ID : 264330612143

Option 3 ID : 264330612146

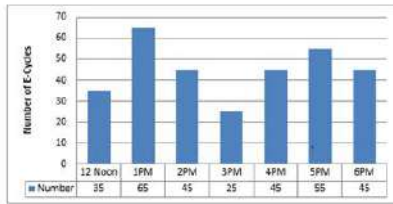
Option 4 ID : 264330612145

Status : Answered

Chosen Option : 1

Q.12 The bar diagram represents the number of E-Cycles parking in a metro station from 12:00 P.M. to 6:00 P.M.

What will be the total collection from 2:00 P.M. to 6:00 P.M. when the parking charge is ₹3 per hour?



- Ans**
- 1. ₹625
 - 2. ₹655
 - 3. ₹645
 - 4. ₹695

Question ID : 264330154063

Option 1 ID : 264330603715

Option 2 ID : 264330603716

Option 3 ID : 264330603717

Option 4 ID : 264330603718

Status : Answered

Chosen Option : 3

Q.13 The income of X is 12% more than that of Y. By how much per cent is Y's income less than that of X?

- Ans**
- 1. $10\frac{4}{7}\%$
 - 2. $10\frac{3}{7}\%$
 - 3. $10\frac{5}{7}\%$
 - 4. $10\frac{2}{7}\%$

Question ID : 264330156216

Option 1 ID : 264330612265

Option 2 ID : 264330612264

Option 3 ID : 264330612266

Option 4 ID : 264330612263

Status : Answered

Chosen Option : 3

Q.14 In what ratio must a grocer mix two varieties of pulses costing ₹18 per kg and ₹22 per kg, respectively, so as to get a mixture worth ₹19.50 per kg?

- Ans**
- 1. 5 : 3
 - 2. 5 : 1
 - 3. 1 : 5
 - 4. 5 : 2

Question ID : 264330156052

Option 1 ID : 264330611609

Option 2 ID : 264330611607

Option 3 ID : 264330611608

Option 4 ID : 264330611610

Status : Answered

Chosen Option : 1

Q.15 If $A : B = 3 : 4$ and $A : C = 9 : 8$, then $A : B : C$ is:

- Ans 1. $9 : 12 : 8$
 2. $3 : 4 : 6$
 3. $9 : 8 : 12$
 4. $9 : 8 : 8$

Question ID : 264330153874
 Option 1 ID : 264330602962
 Option 2 ID : 264330602959
 Option 3 ID : 264330602960
 Option 4 ID : 264330602961
 Status : Answered
 Chosen Option : 1

Q.16 How many kilograms of sugar at ₹3.80 per kg must be mixed with 60 kg of sugar at ₹4.60 per kg, so that by selling the mixture at ₹5.20 per kg there may be a gain of 30%?

- Ans 1. 170 kg
 2. 120 kg
 3. 160 kg
 4. 180 kg

Question ID : 264330156070
 Option 1 ID : 264330611681
 Option 2 ID : 264330611679
 Option 3 ID : 264330611682
 Option 4 ID : 264330611680
 Status : Answered
 Chosen Option : 4

Q.17 Simplify:

$$24 \div 6 \times \left(\frac{3}{4} \text{ of } \frac{1}{3} + \frac{5}{3} \text{ of } \frac{3}{4} \right) = ?$$

- Ans 1. 9
 2. 6
 3. 3
 4. 8

Question ID : 264330156424
 Option 1 ID : 264330613087
 Option 2 ID : 264330613088
 Option 3 ID : 264330613090
 Option 4 ID : 264330613089
 Status : Answered
 Chosen Option : 2

Q.18 A and B can do a piece of work in 9 and 18 days, respectively. They started working together. After some days A left the work and B finished the remaining work in 15 days. After how many days did A leave?

- Ans**
- 1. 1
 - 2. 2
 - 3. 4
 - 4. 3

Question ID : 264330156010
Option 1 ID : 264330611441
Option 2 ID : 264330611442
Option 3 ID : 264330611439
Option 4 ID : 264330611440
Status : Answered
Chosen Option : 1

Q.19 The cost price of an article is ₹1,120. After allowing a discount of ₹205 a gain of 15% was made, then the marked price of the article is:

- Ans**
- 1. ₹1,760
 - 2. ₹1,493
 - 3. ₹1,350
 - 4. ₹1,580

Question ID : 264330156447
Option 1 ID : 264330613182
Option 2 ID : 264330613179
Option 3 ID : 264330613181
Option 4 ID : 264330613180
Status : Answered
Chosen Option : 2

Q.20 12 days are taken by one man and one woman together to complete the work. A man alone can complete the work in 15 days. In how many days can one woman alone complete the work?

- Ans**
- 1. 45 days
 - 2. 30 days
 - 3. 60 days
 - 4. 12 days

Question ID : 264330156063
Option 1 ID : 264330611653
Option 2 ID : 264330611652
Option 3 ID : 264330611654
Option 4 ID : 264330611651
Status : Answered
Chosen Option : 3

Q.1 What should come in place of '?' in the given series?

10 19 ? 199 775 3079 12295

- Ans
- 1. 63
 - 2. 55
 - 3. 50
 - 4. 61

Question ID : 264330151445

Option 1 ID : 264330593410

Option 2 ID : 264330593408

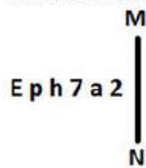
Option 3 ID : 264330593407

Option 4 ID : 264330593409

Status : Answered

Chosen Option : 2

Q.2 Select the correct mirror image of the given figure when the mirror is placed at MN as shown below.



- Ans
- 1. a 2 7 h q E
 - 2. 2 a 7 h q E
 - 3. 2 a 7 h q E
 - 4. 2 a 7 h q E

Question ID : 264330151509

Option 1 ID : 264330593663

Option 2 ID : 264330593666

Option 3 ID : 264330593665

Option 4 ID : 264330593664

Status : Answered

Chosen Option : 3

Q.3 Seven people, S, T, U, V, W, X and Y are sitting in a straight line, facing north. Only two people sit to the right of W. Only three people sit between S and W. U is the immediate neighbour of T and X. X is not the immediate neighbour of W. V sits third to the right of T.

Who is sitting between W and V?

- Ans
- 1. T
 - 2. Y
 - 3. U
 - 4. X

Question ID : 264330155546

Option 1 ID : 264330609588

Option 2 ID : 264330609587

Option 3 ID : 264330609589

Option 4 ID : 264330609590

Status : Answered

Chosen Option : 2

Q.4 Select the combination of letters that when sequentially placed in the blanks of the given series, will complete the series.

J _ JJ _ _ JM _ _ MJ

- Ans**
- 1. JJMMJ
 - 2. MMJJJ
 - 3. MJJMM
 - 4. JMMJM

Question ID : 264330151649

Option 1 ID : 264330594226

Option 2 ID : 264330594225

Option 3 ID : 264330594223

Option 4 ID : 264330594224

Status : Answered

Chosen Option : 2

Q.5 HM 12 is related to FK 17 in a certain way. In the same way, EK 18 is related to CI 23. To which of the following is GU 14 related to following the same logic?

- Ans**
- 1. ES 19
 - 2. IW 20
 - 3. ER 18
 - 4. FS 19

Question ID : 264330151683

Option 1 ID : 264330594359

Option 2 ID : 264330594360

Option 3 ID : 264330594361

Option 4 ID : 264330594362

Status : Answered

Chosen Option : 1

Q.6 Select the set in which the numbers are related in the same way as are the numbers of the following sets.

(NOTE : Operations should be performed on the whole numbers, without breaking down the numbers into its constituent digits. E.g. 13 – Operations on 13 such as adding / subtracting / multiplying etc. to 13 can be performed. Breaking down 13 into 1 and 3 and then performing mathematical operations on 1 and 3 is not allowed)

(5, 35, 7)

(9, 27, 3)

- Ans**
- 1. 16, 50, 7
 - 2. 6, 42, 7
 - 3. 4, 10, 5
 - 4. 6, 17, 9

Question ID : 264330151608

Option 1 ID : 264330594061

Option 2 ID : 264330594060

Option 3 ID : 264330594059

Option 4 ID : 264330594062

Status : Answered

Chosen Option : 2

Q.7 In the following number-pairs, the second number is obtained by applying certain mathematical operations to the first number. Select the set in which the numbers are related in the same way as are the numbers of the following sets.

(NOTE: Operations should be performed on the whole numbers, without breaking down the numbers into its constituent digits. E.g. 13 – Operations on 13 such as adding /deleting /multiplying etc. to 13 can be performed. Breaking down 13 into 1 and 3 and then performing mathematical operations on 1 and 3 is not allowed)

16 : 95

6 : 35

- Ans**
- 1. 8 : 48
 - 2. 13 : 77
 - 3. 2 : 13
 - 4. 17 : 23

Question ID : 264330154653

Option 1 ID : 264330606077

Option 2 ID : 264330606078

Option 3 ID : 264330606076

Option 4 ID : 264330606075

Status : Answered

Chosen Option : 2

Q.8 Read the given statements and conclusions carefully. You have to take the given statements to be true even if they seem to be at variance from commonly known facts. You have to decide which conclusion/s logically follow/s from the given statements.

Statements: Some photos are vases. All vases are tall. Some tall are buildings.

Conclusion I: Some photos are buildings.

Conclusion II: All tall are vases.

- Ans**
- 1. Both conclusions (I) and (II) are follow.
 - 2. Only conclusion (I) is follow.
 - 3. Only conclusion (II) is follow.
 - 4. Neither conclusion (I) nor (II) is follow.

Question ID : 264330155915

Option 1 ID : 264330611066

Option 2 ID : 264330611063

Option 3 ID : 264330611064

Option 4 ID : 264330611065

Status : Answered

Chosen Option : 4

Q.9 What should come in place of ? in the given series based on the English alphabetical order?

JPX, GNU, DLR, AJO, ?

- Ans**
- 1. XHL
 - 2. ZGL
 - 3. YIL
 - 4. YGM

Question ID : 264330155787

Option 1 ID : 264330610551

Option 2 ID : 264330610554

Option 3 ID : 264330610553

Option 4 ID : 264330610552

Status : Answered

Chosen Option : 1

Q.10 In a certain code language, 'LED' is coded as '15-22-23' and 'BMW' is coded as '25-14-4'. What is the code for 'QUE' in the given code language?

- Ans**
- 1. 9-4-21
 - 2. 10-6-21
 - 3. 11-5-20
 - 4. 9-5-20

Question ID : **264330155818**
Option 1 ID : **264330610675**
Option 2 ID : **264330610678**
Option 3 ID : **264330610676**
Option 4 ID : **264330610677**
Status : **Answered**
Chosen Option : **2**

Q.11 What should come in place of ? in the given series?

11 14 20 29 41 ?

- Ans**
- 1. 54
 - 2. 61
 - 3. 56
 - 4. 64

Question ID : **264330151717**
Option 1 ID : **264330594497**
Option 2 ID : **264330594496**
Option 3 ID : **264330594495**
Option 4 ID : **264330594498**
Status : **Answered**
Chosen Option : **3**

Q.12 Select the option figure in which the given figure (X) is embedded as its part (rotation is NOT allowed).



Ans

✗ 1.



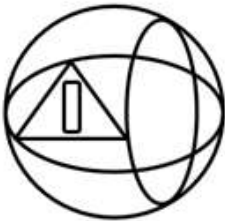
✗ 2.



✓ 3.



✗ 4.



Question ID : 264330151726

Option 1 ID : 264330594531

Option 2 ID : 264330594533

Option 3 ID : 264330594532

Option 4 ID : 264330594534

Status : Answered

Chosen Option : 3

Q.13 In a certain code language, 'DEAN' is coded as '2458' and 'LEND' is coded as '8352'. What is the code for 'L' in the given code language?

- Ans**
- 1. 5
 - 2. 3
 - 3. 8
 - 4. 2

Question ID : **264330151689**
Option 1 ID : **264330594386**
Option 2 ID : **264330594384**
Option 3 ID : **264330594383**
Option 4 ID : **264330594385**
Status : **Answered**
Chosen Option : **2**

Q.14 If 6 July 2011 is a Wednesday, then what will be the day of the week on 16 February 2010?

- Ans**
- 1. Monday
 - 2. Thursday
 - 3. Tuesday
 - 4. Saturday

Question ID : **264330154353**
Option 1 ID : **264330604876**
Option 2 ID : **264330604877**
Option 3 ID : **264330604875**
Option 4 ID : **264330604878**
Status : **Answered**
Chosen Option : **4**

Q.15 What should come in place of the question mark (?) in the given series based on the English alphabetical order?

DJS, HNT, LRU, PVV, ?

- Ans**
- 1. SRV
 - 2. UTV
 - 3. TZW
 - 4. USV

Question ID : **264330156298**
Option 1 ID : **264330612591**
Option 2 ID : **264330612593**
Option 3 ID : **264330612592**
Option 4 ID : **264330612594**
Status : **Answered**
Chosen Option : **3**

Q.16 What should come in place of '?' in the given series?

7 41 177 721 2897 ?

- Ans
- 1. 12589
 - 2. 11601
 - 3. 11283
 - 4. 10631

Question ID : 264330151462
 Option 1 ID : 264330593478
 Option 2 ID : 264330593477
 Option 3 ID : 264330593476
 Option 4 ID : 264330593475
 Status : Answered
 Chosen Option : 2

Q.17 What will come in the place of '?' in the following equation, if '+' and '-' are interchanged and '×' and '÷' are interchanged?

$$121 \times 11 + 7 - 15 + 23 = ?$$

- Ans
- 1. 69
 - 2. 49
 - 3. 59
 - 4. 79

Question ID : 264330155675
 Option 1 ID : 264330610103
 Option 2 ID : 264330610106
 Option 3 ID : 264330610104
 Option 4 ID : 264330610105
 Status : Answered
 Chosen Option : 1

Q.18 Read the given statements and conclusions carefully. You have to take the given statements to be true even if they seem to be at variance from commonly known facts. You have to decide which conclusion/s logically follow/s from the given statements.

Statements: All bed are covers. Some covers are thick. Some thick is juice.

Conclusion I: All covers are beds.

Conclusion II: Some thick are covers.

- Ans
- 1. Neither conclusion (I) nor (II) is follow.
 - 2. Only conclusion (II) is follow.
 - 3. Both conclusions (I) and (II) are follow.
 - 4. Only conclusion (I) is follow.

Question ID : 264330155900
 Option 1 ID : 264330611005
 Option 2 ID : 264330611004
 Option 3 ID : 264330611006
 Option 4 ID : 264330611003
 Status : Answered
 Chosen Option : 2

Q.19 Which figure should replace the question mark (?) if the following figure series were to be continued?

Z	O	K	B	U	Z	△	K	
B	U	L	K	O	L	△	Z	K
↑		△	U	↑	O	9	B	O
								?

Ans

✗ 1.

B	O		
△	9	L	K
Z			U

✓ 2.

B		U	
△	K	L	9
Z			A

✗ 3.

B		A	
△	O	L	9
Z			U

✗ 4.

B		△	
U	Z	L	9
O			K

Question ID : 264330154751

Option 1 ID : 264330606467

Option 2 ID : 264330606469

Option 3 ID : 264330606470

Option 4 ID : 264330606468

Status : Answered

Chosen Option : 2

Q.20 What will come in place of '?' in the following equation, if '+' and '×' are interchanged and '-' and '÷' are interchanged?

$$2 \times 4 - 1 + 6 + 8 = ?$$

Ans ✗ 1. -13

✓ 2. -42

✗ 3. -18

✗ 4. -24

Question ID : 264330154660

Option 1 ID : 264330606103

Option 2 ID : 264330606105

Option 3 ID : 264330606106

Option 4 ID : 264330606104

Status : Answered

Chosen Option : 2

Q.1 If 7 N force is applied on a brick and it moves through 5 m, then what will be the work done?

- Ans
- 1. 25 J
 - 2. 40 J
 - 3. 35 J
 - 4. 35 Erg

Question ID : 264330156582
Option 1 ID : 264330613715
Option 2 ID : 264330613718
Option 3 ID : 264330613716
Option 4 ID : 264330613717
Status : Answered
Chosen Option : 3

Q.2 _____ is celebrated in Jharkhand immediately after Diwali on the new moon day in the honour of cattle.

- Ans
- 1. Bhagta Parab
 - 2. Makar
 - 3. Rohini
 - 4. Sohrai

Question ID : 264330160837
Option 1 ID : 264330630681
Option 2 ID : 264330630680
Option 3 ID : 264330630682
Option 4 ID : 264330630679
Status : Answered
Chosen Option : 4

Q.3 Which of the following novels is NOT written by Mulk Raj Anand?

- Ans
- 1. The Sword and the Sickle
 - 2. Coolie
 - 3. Private Life of an Indian Prince
 - 4. The Guide

Question ID : 264330155499
Option 1 ID : 264330609400
Option 2 ID : 264330609399
Option 3 ID : 264330609402
Option 4 ID : 264330609401
Status : Answered
Chosen Option : 2

Q.4 Which of the dance was immediately preceded by a practice session called sevakali and undertaken in the precincts of a temple?

- Ans 1. Kathakali
 2. Kathak
 3. Odissi
 4. Kuchipudi

Question ID : 264330159054
Option 1 ID : 264330623577
Option 2 ID : 264330623576
Option 3 ID : 264330623575
Option 4 ID : 264330623578
Status : Not Answered
Chosen Option : --

Q.5 Which of the following is a duty of the Attorney General of India?

- Ans 1. To give advice to the Government of India on legal matters
 2. To act as a judge in the Supreme Court
 3. To advise the State Government
 4. To represent India in international bodies

Question ID : 264330161286
Option 1 ID : 264330632472
Option 2 ID : 264330632473
Option 3 ID : 264330632471
Option 4 ID : 264330632474
Status : Answered
Chosen Option : 1

Q.6 The cultural heritage of Siddhis from _____ dates back to almost 300 years and their Siddhi Dhamal dance is an exquisite art form.

- Ans 1. Uttar Pradesh
 2. Gujarat
 3. Madhya Pradesh
 4. Rajasthan

Question ID : 264330160795
Option 1 ID : 264330630514
Option 2 ID : 264330630511
Option 3 ID : 264330630513
Option 4 ID : 264330630512
Status : Answered
Chosen Option : 2

Q.7 Which of the following locations experiences the lowest amount of rainfall during the monsoon season?

- Ans 1. Kerala
 2. Assam
 3. Leh
 4. Meghalaya

Question ID : 264330157827
Option 1 ID : 264330618667
Option 2 ID : 264330618668
Option 3 ID : 264330618669
Option 4 ID : 264330618670
Status : Answered
Chosen Option : 3

Q.8 In which of the following cities was the 2023 IPL final match held?

- Ans**
- 1. Kolkata
 - 2. Chennai
 - 3. Mumbai
 - 4. Ahmedabad

Question ID : 264330161148
Option 1 ID : 264330631925
Option 2 ID : 264330631924
Option 3 ID : 264330631926
Option 4 ID : 264330631923
Status : Answered
Chosen Option : 4

Q.9 Who among the following was the director of Kathak Kendra and also opened his own dance school named 'Kalashram'?

- Ans**
- 1. Pandit Lachhu Maharaj
 - 2. Pandit Shambhu Maharaj
 - 3. Pandit Birju Maharaj
 - 4. Pandit Acchan Maharaj

Question ID : 264330155476
Option 1 ID : 264330609309
Option 2 ID : 264330609308
Option 3 ID : 264330609307
Option 4 ID : 264330609310
Status : Answered
Chosen Option : 3

Q.10 What is a budget deficit?

- Ans**
- 1. The excess of government revenue over expenditure
 - 2. The amount of money allocated for defence spending
 - 3. The amount of money allocated for social welfare programmes
 - 4. The excess of government expenditure over revenue

Question ID : 264330157271
Option 1 ID : 264330616447
Option 2 ID : 264330616449
Option 3 ID : 264330616450
Option 4 ID : 264330616448
Status : Answered
Chosen Option : 4

Q.11 What is a revenue expenditure?

- Ans**
- 1. Money spent on day-to-day government operations
 - 2. Money spent on debt repayment
 - 3. Money spent on purchasing assets
 - 4. Money spent on construction of roads

Question ID : 264330157273
Option 1 ID : 264330616458
Option 2 ID : 264330616457
Option 3 ID : 264330616455
Option 4 ID : 264330616456
Status : Answered
Chosen Option : 4

Q.12 Which Indian musician won the Grammy award for 'A Meeting by The River' with Ry Cooder in 1994?

- Ans
- 1. Ravi Shankar
 - 2. Vishwa Mohan Bhatt
 - 3. Hariprasad Chaurasia
 - 4. Zakir Hussain

Question ID : 264330155471
Option 1 ID : 264330609289
Option 2 ID : 264330609288
Option 3 ID : 264330609290
Option 4 ID : 264330609287
Status : Answered
Chosen Option : 4

Q.13 The holy mountain 'Kailash' is located in which neighbouring country of India?

- Ans
- 1. Pakistan
 - 2. Afghanistan
 - 3. Bangladesh
 - 4. China

Question ID : 264330161562
Option 1 ID : 264330633576
Option 2 ID : 264330633577
Option 3 ID : 264330633578
Option 4 ID : 264330633575
Status : Answered
Chosen Option : 4

Q.14 In which of the following states of India the 'Loo' wind does NOT blow during the summer season?

- Ans
- 1. Punjab
 - 2. Rajasthan
 - 3. Goa
 - 4. Haryana

Question ID : 264330161520
Option 1 ID : 264330633408
Option 2 ID : 264330633407
Option 3 ID : 264330633410
Option 4 ID : 264330633409
Status : Answered
Chosen Option : 3

Q.15 The Wild Life (Protection) Amendment Act, 2022 seeks to implement the Convention on International Trade in Endangered Species of Wild Fauna and Flora (CITES). Which of the following statements is correct about CITES?

1. CITES is an agreement between governments to ensure that international trade in the specimens of wild animals and plants does not threaten the survival of the species.
2. Under CITES, plant and animal specimens are classified into five categories based on the threat to their extinction.
3. The Convention requires countries to regulate the trade of all listed specimens through permits.
4. It also seeks to regulate the possession of live animal specimens.

Ans 1. 1, 2 and 4

2. 1, 3 and 4

3. 2, 3 and 4

4. 1, 2 and 3

Question ID : 264330161413

Option 1 ID : 264330632982

Option 2 ID : 264330632980

Option 3 ID : 264330632981

Option 4 ID : 264330632979

Status : Answered

Chosen Option : 2

Q.16 'My Story' is the autobiography of which female writer?

Ans 1. Amrita Pritam

2. Pratibha Ray

3. Kamala Das

4. Ashapura Devi

Question ID : 264330160964

Option 1 ID : 264330631188

Option 2 ID : 264330631189

Option 3 ID : 264330631187

Option 4 ID : 264330631190

Status : Answered

Chosen Option : 1

Q.17 Which age group of the population are covered under the Deen Dayal Upadhyaya Grameen Kaushalya Yojana (DDU-GKY) scheme of the Government of India?

Ans 1. 25 to 60 years

2. 30 to 60 years

3. 15 to 35 years

4. 14 to 40 years

Question ID : 264330161576

Option 1 ID : 264330633632

Option 2 ID : 264330633631

Option 3 ID : 264330633633

Option 4 ID : 264330633634

Status : Answered

Chosen Option : 3

Q.18 Who was the founder of Naujawan Bharat Sabha?

- Ans 1. Chandra Shekhar Azad
 2. Ajeet Singh
 3. Lala Lajpat Rai
 4. Bhagat Singh

Question ID : 264330162332
Option 1 ID : 264330636657
Option 2 ID : 264330636655
Option 3 ID : 264330636656
Option 4 ID : 264330636658
Status : Answered
Chosen Option : 1

Q.19 Which gland gets enlarged in the goitre due to which there is a swelling in the front part of the throat?

- Ans 1. Adrenal gland
 2. Thyroid gland
 3. Pineal gland
 4. Pituitary gland

Question ID : 264330161073
Option 1 ID : 264330631623
Option 2 ID : 264330631626
Option 3 ID : 264330631624
Option 4 ID : 264330631625
Status : Answered
Chosen Option : 2

Q.20 In which state is the Bhitari temple situated?

- Ans 1. Uttar Pradesh
 2. Odisha
 3. Jharkhand
 4. Bihar

Question ID : 264330160780
Option 1 ID : 264330630453
Option 2 ID : 264330630451
Option 3 ID : 264330630452
Option 4 ID : 264330630454
Status : Answered
Chosen Option : 2

Q.21 Shubman Gill was in the news for creating a record in his sport. What sport does he play?

- Ans 1. Chess
 2. Cricket
 3. Hockey
 4. Badminton

Question ID : 264330158354
Option 1 ID : 264330620778
Option 2 ID : 264330620777
Option 3 ID : 264330620776
Option 4 ID : 264330620775
Status : Answered
Chosen Option : 2

Q.22 Which of the following does NOT come under Fundamental Duties?

- Ans 1. To develop the scientific temper
 2. To pay taxes
 3. To promote harmony
 4. To respect National Anthem

Question ID : 264330159899
Option 1 ID : 264330626946
Option 2 ID : 264330626943
Option 3 ID : 264330626945
Option 4 ID : 264330626944
Status : Marked For Review
Chosen Option : 1

Q.23 Who among the following was a world famous 'Sitar' player?

- Ans 1. Pandit Ravi Shankar
 2. Ustad Shafaat Ahmed Khan
 3. Rajaratanam Pillai
 4. Ali Ahmad Hussain

Question ID : 264330155509
Option 1 ID : 264330609442
Option 2 ID : 264330609439
Option 3 ID : 264330609441
Option 4 ID : 264330609440
Status : Answered
Chosen Option : 1

Q.24 Which of the following institutions bagged the maximum medals at the third edition of Khelo India University Games?

- Ans 1. Panjab University
 2. University of Kerala
 3. Guru Nanak Dev University
 4. Jain University

Question ID : 264330161134
Option 1 ID : 264330631870
Option 2 ID : 264330631869
Option 3 ID : 264330631868
Option 4 ID : 264330631867
Status : Answered
Chosen Option : 1

Q.25 In which year did the All-India Muslim League move a resolution demanding 'Independent States' for Muslims in the north-western and eastern areas of the country?

- Ans 1. 1942
 2. 1940
 3. 1939
 4. 1941

Question ID : 264330161740
Option 1 ID : 264330634290
Option 2 ID : 264330634288
Option 3 ID : 264330634287
Option 4 ID : 264330634289
Status : Answered
Chosen Option : 3

Section : English Language and Comprehension

Q.1 Parts of the following sentence have been given as options. Select the option that contains an error.

A soothe voice must convey both confidence and intimacy, qualities which can be attributed to a few key components.

- Ans 1. few key components
 2. A soothe voice
 3. convey both confidence
 4. which can be

Question ID : 264330153615
Option 1 ID : 264330601946
Option 2 ID : 264330601943
Option 3 ID : 264330601944
Option 4 ID : 264330601945
Status : Answered
Chosen Option : 2

Q.2 Select the most appropriate ANTONYM of the given word.
Empathetic

- Ans 1. Lonely
 2. Merciless
 3. Charismatic
 4. Frustrated

Question ID : 264330151915
Option 1 ID : 264330595276
Option 2 ID : 264330595277
Option 3 ID : 264330595275
Option 4 ID : 264330595278
Status : Answered
Chosen Option : 2

Q.3 Select the most appropriate meaning of the underlined idiom.
The police inspector knows the ins and outs of the murder case.

- Ans
- 1. laws
 - 2. all the witnesses
 - 3. lawyers and judges
 - 4. full details

Question ID : 264330152753
Option 1 ID : 264330598613
Option 2 ID : 264330598611
Option 3 ID : 264330598614
Option 4 ID : 264330598612
Status : Answered
Chosen Option : 4

Q.4 The following sentence has been split into four segments. Identify the segment that contains an error.
He told me / that he goes / to the market / to buy a laptop.

- Ans
- 1. He told me
 - 2. to buy a laptop
 - 3. to the market
 - 4. that he goes

Question ID : 264330151288
Option 1 ID : 264330592787
Option 2 ID : 264330592790
Option 3 ID : 264330592789
Option 4 ID : 264330592788
Status : Answered
Chosen Option : 4

Q.5 Select the most appropriate option that can substitute the underlined word in the following sentence.
The energetic kitten is playful after having his breakfast.

- Ans
- 1. its
 - 2. it's
 - 3. it
 - 4. it is

Question ID : 264330152575
Option 1 ID : 264330597903
Option 2 ID : 264330597905
Option 3 ID : 264330597904
Option 4 ID : 264330597906
Status : Answered
Chosen Option : 1

Q.6 The following sentence has been split into four segments. Identify the segment that contains a grammatical error.
It is commonly believed / that Democracy is / the best form / of the government.

- Ans** 1. of the government
 2. It is commonly believed
 3. that Democracy is
 4. the best form

Question ID : 264330153167
Option 1 ID : 264330600230
Option 2 ID : 264330600227
Option 3 ID : 264330600228
Option 4 ID : 264330600229
Status : Answered
Chosen Option : 1

Q.7 Four words of the following sentence have been underlined and given as options.
Select the option that contains a spelling error.
Ozone is a reactiev gas that is not only important in protecting us from harmful ultraviolet radiation but is also a greenhouse gas and, at high smog-level concentrations, harmful to human health and vegetation.

- Ans** 1. reactiev
 2. radiation
 3. concentrations
 4. vegetation

Question ID : 264330151931
Option 1 ID : 264330595339
Option 2 ID : 264330595340
Option 3 ID : 264330595341
Option 4 ID : 264330595342
Status : Answered
Chosen Option : 1

Q.8 Select the most appropriate option that can substitute the underlined segment in the given sentence.
He said that I have finished my work.

- Ans** 1. he had finished his work
 2. he has finished his work
 3. I had finished my work
 4. he was finished his work

Question ID : 264330152707
Option 1 ID : 264330598429
Option 2 ID : 264330598430
Option 3 ID : 264330598428
Option 4 ID : 264330598427
Status : Answered
Chosen Option : 1

Q.9 Parts of the following sentence have been underlined and given as options. Select the option that contains a misspelt word.

A piano teacher described an interesting encountar she had with a young lady who came to inquire about music lessons.

- Ans
- 1. interesting
 - 2. inquire
 - 3. piano
 - 4. encountar

Question ID : 264330151834
Option 1 ID : 264330594964
Option 2 ID : 264330594966
Option 3 ID : 264330594963
Option 4 ID : 264330594965
Status : Answered
Chosen Option : 4

Q.10 Select the most appropriate meaning of the underlined idiom.

The executives were running around in circles, without any success.

- Ans
- 1. Achieving maximum mileage
 - 2. Suffering huge profits and losses
 - 3. Successfully accomplishing the target
 - 4. Putting efforts into something that does not give a worthwhile result

Question ID : 264330153143
Option 1 ID : 264330600133
Option 2 ID : 264330600134
Option 3 ID : 264330600132
Option 4 ID : 264330600131
Status : Answered
Chosen Option : 4

Q.11 Select the most appropriate option that can substitute the underlined segment in the given sentence. If there is no need to substitute it, select 'No substitution required'.
Many great people born in that small village.

- Ans
- 1. was born
 - 2. No substitution required
 - 3. is born
 - 4. were born

Question ID : 264330152729
Option 1 ID : 264330598516
Option 2 ID : 264330598518
Option 3 ID : 264330598515
Option 4 ID : 264330598517
Status : Answered
Chosen Option : 4

Q.12 The given sentence contains an error. Select the option that correctly rectifies the error.

He was carefulest while stealing the crown jewels.

- Ans
- 1. He was more careful while stealing the crown jewels.
 - 2. He was most carefuller while stealing the crown jewels.
 - 3. He was carefuller while stealing the crown jewels.
 - 4. He was most careful while stealing the crown jewels.

Question ID : 264330152610

Option 1 ID : 264330598044

Option 2 ID : 264330598046

Option 3 ID : 264330598043

Option 4 ID : 264330598045

Status : Answered

Chosen Option : 4

Q.13 Select the most appropriate synonym of the given word.

Hesitate

- Ans
- 1. Blabber
 - 2. Recoil
 - 3. Conceal
 - 4. Falter

Question ID : 264330151878

Option 1 ID : 264330595133

Option 2 ID : 264330595131

Option 3 ID : 264330595132

Option 4 ID : 264330595134

Status : Answered

Chosen Option : 2

Q.14 The sentence given below has spelling errors. Select the sentence without spelling errors.

We can also contribute to presarvation of water bodies by not dumping our garbage in them.

- Ans
- 1. We can also contribute to presarvation of water bodies by not dumpeing our garbage in them.
 - 2. We can also contribute to preservation of water bodies by not dumping our garbage in them.
 - 3. We can also contribut to presarvation of water bodies by not dumping our garbage in them.
 - 4. We can also contribute to presarvation of water bodies by not dumping our garbag in them.

Question ID : 264330151840

Option 1 ID : 264330594989

Option 2 ID : 264330594988

Option 3 ID : 264330594987

Option 4 ID : 264330594990

Status : Answered

Chosen Option : 2

Q.15 Select the most appropriate meaning of the given idiom.

Call it a day

- Ans 1. To have the greatest day ever
 2. To stop working
 3. To be very straightforward
 4. To refer to something as something else

Question ID : 264330153014
Option 1 ID : 264330599627
Option 2 ID : 264330599628
Option 3 ID : 264330599630
Option 4 ID : 264330599629
Status : Answered
Chosen Option : 2

Q.16 Select the most appropriate ANTONYM of the given word.
Stern

- Ans 1. Stable
 2. Sincere
 3. Profound
 4. Lenient

Question ID : 264330152678
Option 1 ID : 264330598318
Option 2 ID : 264330598316
Option 3 ID : 264330598315
Option 4 ID : 264330598317
Status : Answered
Chosen Option : 4

Q.17 Select the most appropriate option that can substitute the underlined segment in the given sentence.

His older brothers were quite willing that he should went to sea.

- Ans 1. had go to
 2. have gone in
 3. gone to
 4. go to

Question ID : 264330153486
Option 1 ID : 264330601461
Option 2 ID : 264330601462
Option 3 ID : 264330601460
Option 4 ID : 264330601459
Status : Answered
Chosen Option : 4

Q.18 Select the most appropriate option that can substitute the underlined segment in the given sentence. If there is no need to substitute it, select 'No improvement required'. It is true that learning English is essential for professionals to survived the national and international competitions.

- Ans**
- 1. to be survive
 - 2. having to survive
 - 3. No improvement required
 - 4. for surviving

Question ID : 264330153536
Option 1 ID : 264330601647
Option 2 ID : 264330601649
Option 3 ID : 264330601650
Option 4 ID : 264330601648
Status : Answered
Chosen Option : 4

Q.19 Select the most appropriate option to fill in the blank.
The tigress that was killed by the villagers was not only a man-eater, _____ a mother.

- Ans**
- 1. but
 - 2. but also
 - 3. and
 - 4. but often

Question ID : 264330152635
Option 1 ID : 264330598145
Option 2 ID : 264330598143
Option 3 ID : 264330598144
Option 4 ID : 264330598146
Status : Answered
Chosen Option : 2

Q.20 Select the most appropriate meaning of the given idiom.
Spill the beans

- Ans**
- 1. Excellent health
 - 2. Behave or speak in a rash manner
 - 3. Things always get worse
 - 4. To reveal a secret information unintentionally

Question ID : 264330153281
Option 1 ID : 264330600680
Option 2 ID : 264330600681
Option 3 ID : 264330600682
Option 4 ID : 264330600679
Status : Answered
Chosen Option : 4

Comprehension:

In the following passage, some words have been deleted. Read the passage carefully and select the most appropriate option to fill in each blank.

Photosynthesis is the _____(1) used by plants, algae and some bacteria to turn sunlight into energy. The process chemically _____(2) carbon dioxide and water into food and oxygen. The chemical reaction often _____(3) on a pigment called chlorophyll, which gives plants their green colour. Photosynthesis is also the _____(4) our planet is blanketed in an oxygen-rich atmosphere. Plants absorb carbon dioxide from the _____(5) air and release water and oxygen via microscopic pores on their leaves called stomata.

SubQuestion No : 21

Q.21 Select the most appropriate option to fill in blank number 1.

- Ans** 1. process
 2. guess
 3. chaos
 4. area

Question ID : **264330153499**
Option 1 ID : **264330601507**
Option 2 ID : **264330601509**
Option 3 ID : **264330601510**
Option 4 ID : **264330601508**
Status : **Answered**
Chosen Option : **1**

Comprehension:

In the following passage, some words have been deleted. Read the passage carefully and select the most appropriate option to fill in each blank.

Photosynthesis is the _____(1) used by plants, algae and some bacteria to turn sunlight into energy. The process chemically _____(2) carbon dioxide and water into food and oxygen. The chemical reaction often _____(3) on a pigment called chlorophyll, which gives plants their green colour. Photosynthesis is also the _____(4) our planet is blanketed in an oxygen-rich atmosphere. Plants absorb carbon dioxide from the _____(5) air and release water and oxygen via microscopic pores on their leaves called stomata.

SubQuestion No : 22

Q.22 Select the most appropriate option to fill in blank number 2.

- Ans** 1. converts
 2. exceeds
 3. crates
 4. bows

Question ID : **264330153500**
Option 1 ID : **264330601514**
Option 2 ID : **264330601512**
Option 3 ID : **264330601513**
Option 4 ID : **264330601511**
Status : **Answered**
Chosen Option : **1**

Comprehension:

In the following passage, some words have been deleted. Read the passage carefully and select the most appropriate option to fill in each blank.

Photosynthesis is the _____(1) used by plants, algae and some bacteria to turn sunlight into energy. The process chemically _____(2) carbon dioxide and water into food and oxygen. The chemical reaction often _____(3) on a pigment called chlorophyll, which gives plants their green colour. Photosynthesis is also the _____(4) our planet is blanketed in an oxygen-rich atmosphere. Plants absorb carbon dioxide from the _____(5) air and release water and oxygen via microscopic pores on their leaves called stomata.

SubQuestion No : 23

Q.23 Select the most appropriate option to fill in blank number 3.

- Ans** 1. relies
 2. creates
 3. hopes
 4. wants

Question ID : **264330153501**

Option 1 ID : **264330601517**

Option 2 ID : **264330601518**

Option 3 ID : **264330601515**

Option 4 ID : **264330601516**

Status : **Answered**

Chosen Option : **1**

Comprehension:

In the following passage, some words have been deleted. Read the passage carefully and select the most appropriate option to fill in each blank.

Photosynthesis is the _____(1) used by plants, algae and some bacteria to turn sunlight into energy. The process chemically _____(2) carbon dioxide and water into food and oxygen. The chemical reaction often _____(3) on a pigment called chlorophyll, which gives plants their green colour. Photosynthesis is also the _____(4) our planet is blanketed in an oxygen-rich atmosphere. Plants absorb carbon dioxide from the _____(5) air and release water and oxygen via microscopic pores on their leaves called stomata.

SubQuestion No : 24

Q.24 Select the most appropriate option to fill in blank number 4.

- Ans** 1. goal
 2. sense
 3. reason
 4. occasion

Question ID : **264330153502**

Option 1 ID : **264330601522**

Option 2 ID : **264330601519**

Option 3 ID : **264330601520**

Option 4 ID : **264330601521**

Status : **Answered**

Chosen Option : **3**

Comprehension:

In the following passage, some words have been deleted. Read the passage carefully and select the most appropriate option to fill in each blank.

Photosynthesis is the _____(1) used by plants, algae and some bacteria to turn sunlight into energy. The process chemically _____(2) carbon dioxide and water into food and oxygen. The chemical reaction often _____(3) on a pigment called chlorophyll, which gives plants their green colour. Photosynthesis is also the _____(4) our planet is blanketed in an oxygen-rich atmosphere. Plants absorb carbon dioxide from the _____(5) air and release water and oxygen via microscopic pores on their leaves called stomata.

SubQuestion No : 25

Q.25 Select the most appropriate option to fill in blank number 5.

- Ans 1. afar
 2. distant
 3. surrounding
 4. close

Question ID : 264330153503

Option 1 ID : 264330601525

Option 2 ID : 264330601523

Option 3 ID : 264330601524

Option 4 ID : 264330601526

Status : Answered

Chosen Option : 3