

SSC MTS 2023 Tier 1 Sept 4 Shift 1 Question Paper with Answers

Roll Number	
Candidate Name	
Exam Date	04/09/2023
Exam Time	9:00 AM - 11:00 AM
Subject	MTS Non Tech Havaladar CBIC and CBN Examination 2023

Section : Numerical and Mathematical Ability

Q.1 Find the area of an equilateral triangle, each of whose sides measures 12 cm.

- Ans 1. $36\sqrt{3} \text{ cm}^2$
 2. $3\sqrt{3} \text{ cm}^2$
 3. $\frac{36}{\sqrt{3}} \text{ cm}^2$
 4. $\frac{72}{\sqrt{3}} \text{ cm}^2$

Question ID : 264330153893

Option 1 ID : 264330603037

Option 2 ID : 264330603035

Option 3 ID : 264330603038

Option 4 ID : 264330603036

Status : Answered

Chosen Option : 1

Q.2 The radius and the height of a right circular cone are in the ratio 3 : 4. If its volume is 301.44 m^3 , find the slant height (use $\pi = 3.14$).

- Ans 1. 5 cm
 2. 20 cm
 3. 10 cm
 4. 15 cm

Question ID : 264330156370

Option 1 ID : 264330612882

Option 2 ID : 264330612879

Option 3 ID : 264330612881

Option 4 ID : 264330612880

Status : Answered

Chosen Option : 3

Q.3 At what rate of interest per annum, compounded annually, will an amount of ₹8,000 yield a compound interest of ₹904.2 in 2 years?

- Ans**
- 1. 6%
 - 2. 8%
 - 3. 10%
 - 4. 5.5%

Question ID : **264330156346**
Option 1 ID : **264330612783**
Option 2 ID : **264330612784**
Option 3 ID : **264330612786**
Option 4 ID : **264330612785**
Status : **Answered**
Chosen Option : **4**

Q.4 The average of the first 10 prime number is:

- Ans**
- 1. 12.9
 - 2. 9.7
 - 3. 11.9
 - 4. 13.4

Question ID : **264330154075**
Option 1 ID : **264330603765**
Option 2 ID : **264330603764**
Option 3 ID : **264330603763**
Option 4 ID : **264330603766**
Status : **Answered**
Chosen Option : **1**

Q.5 A manufacturer earns a profit of 10% on selling his products to a wholesale dealer. The wholesale dealer earns a profit of 15% by selling it to a retailer. The retailer, in turn, earns a profit of 25% from the customer. What is the actual cost of production of an article for which the customer pays ₹12,650?

- Ans**
- 1. ₹8,000
 - 2. ₹8,500
 - 3. ₹9,000
 - 4. ₹7,000

Question ID : **264330154123**
Option 1 ID : **264330603956**
Option 2 ID : **264330603957**
Option 3 ID : **264330603958**
Option 4 ID : **264330603955**
Status : **Answered**
Chosen Option : **1**

Q.6 Number of eggs produced by five farms:

Year	Farm				
	L	M	N	O	P
2019	825	925	670	740	480
2020	928	768	781	530	864
2021	765	635	922	515	940
2022	832	526	623	618	745

What is the respective ratio of the dozens of eggs produced by farm M to farm P in the year 2020?

- Ans**
- ✓ 1. 8 : 9
 - ✗ 2. 9 : 8
 - ✗ 3. 7 : 8
 - ✗ 4. 4 : 3

Question ID : 264330155761

Option 1 ID : 264330610447

Option 2 ID : 264330610450

Option 3 ID : 264330610448

Option 4 ID : 264330610449

Status : Answered

Chosen Option : 1

Q.7 The average of the first 69 natural numbers is:

- Ans**
- ✗ 1. 34
 - ✓ 2. 35
 - ✗ 3. 33
 - ✗ 4. 36

Question ID : 264330156209

Option 1 ID : 264330612236

Option 2 ID : 264330612237

Option 3 ID : 264330612235

Option 4 ID : 264330612238

Status : Answered

Chosen Option : 2

Q.8 By selling a TV set for ₹16,800, a salesman gains a profit of 20%. If the production cost is increased by 20%, find the new selling price of the set so as to gain 20%.

- Ans**
- ✗ 1. ₹18,160
 - ✗ 2. ₹18,480
 - ✓ 3. ₹20,160
 - ✗ 4. ₹20,480

Question ID : 264330155999

Option 1 ID : 264330611395

Option 2 ID : 264330611397

Option 3 ID : 264330611398

Option 4 ID : 264330611396

Status : Answered

Chosen Option : 3

Q.9 A mixture contains milk and water in the ratio 9 : 7. If it contains 4 litres more milk than water, then find the quantity of milk (in litres) in the mixture.

- Ans**
- 1. 18
 - 2. 15
 - 3. 21
 - 4. 14

Question ID : 264330156051
Option 1 ID : 264330611603
Option 2 ID : 264330611605
Option 3 ID : 264330611606
Option 4 ID : 264330611604
Status : Answered
Chosen Option : 1

Q.10 Juli and Rahul can simultaneously finish the work of painting a room in 12 days. If Juli alone can paint the room in 20 days, in how many days can Rahul alone complete the same work of painting the room?

- Ans**
- 1. 30
 - 2. 25
 - 3. 40
 - 4. 35

Question ID : 264330155719
Option 1 ID : 264330610280
Option 2 ID : 264330610279
Option 3 ID : 264330610282
Option 4 ID : 264330610281
Status : Answered
Chosen Option : 1

Q.11 The mean proportion of $(3+2\sqrt{2})^2$ and $(3-2\sqrt{2})^2$ is:

- Ans**
- 1. $3 + 2\sqrt{2}$
 - 2. 5
 - 3. $2\sqrt{2}$
 - 4. 1

Question ID : 264330154052
Option 1 ID : 264330603674
Option 2 ID : 264330603671
Option 3 ID : 264330603672
Option 4 ID : 264330603673
Status : Answered
Chosen Option : 4

Q.12 Three measuring tapes are 64 cm, 72 cm and 96 cm, respectively. What is the least length that can be measured by any of the tapes exactly (in cm)?

- Ans**
- 1. 575
 - 2. 570
 - 3. 576
 - 4. 525

Question ID : 264330155984

Option 1 ID : 264330611337

Option 2 ID : 264330611335

Option 3 ID : 264330611336

Option 4 ID : 264330611338

Status : Answered

Chosen Option : 3

Q.13 A work can be completed by P and Q working separately in 12 and 18 days, respectively. But they work on alternate days beginning with P. How many days will it take to complete the work?

- Ans**
- 1. $14\frac{1}{12}$
 - 2. 15
 - 3. $14\frac{1}{3}$
 - 4. $14\frac{1}{4}$

Question ID : 264330154059

Option 1 ID : 264330603702

Option 2 ID : 264330603700

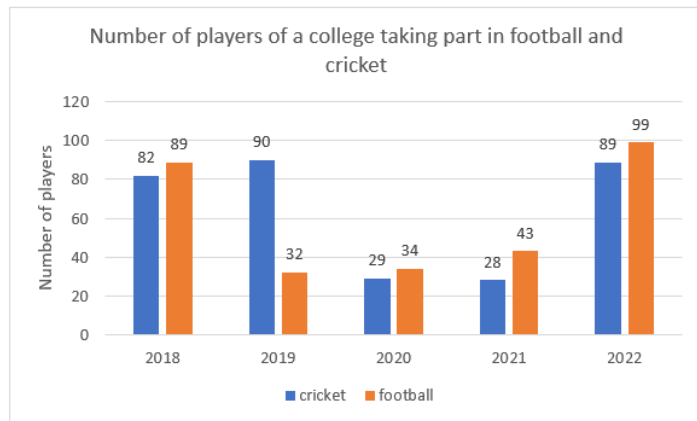
Option 3 ID : 264330603701

Option 4 ID : 264330603699

Status : Answered

Chosen Option : 3

Q.14 The bar graph shows the number of players of a college taking part in two games for five years:



What is the total number of players playing cricket and football in 2019 and 2020?

- Ans**
- 1. 190
 - 2. 195
 - 3. 185
 - 4. 180

Question ID : 264330154100

Option 1 ID : 264330603864

Option 2 ID : 264330603865

Option 3 ID : 264330603863

Option 4 ID : 264330603866

Status : Answered

Chosen Option : 3

Q.15 P and Q start from point A to point B, at the same time at speeds of 32 km/h and 40 km/h, respectively. If in covering the journey P takes 15 minutes longer than Q, the total distance AB of the journey is:

- Ans**
- 1. 36 km
 - 2. 32 km
 - 3. 40 km
 - 4. 44 km

Question ID : 264330156366

Option 1 ID : 264330612865

Option 2 ID : 264330612866

Option 3 ID : 264330612864

Option 4 ID : 264330612863

Status : Answered

Chosen Option : 3

Q.16 Simplify

$$108 \div 36 \times 4 + 2.5 \times 4 \div 0.5 - 10$$

- Ans
- 1. 10
 - 2. 22
 - 3. 21
 - 4. 20

Question ID : 264330156049
Option 1 ID : 264330611595
Option 2 ID : 264330611598
Option 3 ID : 264330611597
Option 4 ID : 264330611596
Status : Answered
Chosen Option : 2

Q.17 A car dealer borrows ₹20,000 from a bank for a period of 2 years at a simple interest rate of 8% per annum. If he repays the loan in full at the end of the 2-year period, how much will he have to pay?

- Ans
- 1. ₹3,600
 - 2. ₹23,600
 - 3. ₹23,200
 - 4. ₹3,200

Question ID : 264330156269
Option 1 ID : 264330612478
Option 2 ID : 264330612476
Option 3 ID : 264330612475
Option 4 ID : 264330612477
Status : Answered
Chosen Option : 3

Q.18 A lady invests ₹27,600 in three shares in the ratio 3 : 4 : 5 which pay dividends of 20%, 15% and 5% on her investment for that year, respectively. What is the total dividend?

- Ans
- 1. ₹3,852
 - 2. ₹3,335
 - 3. ₹3,125
 - 4. ₹2,535

Question ID : 264330154087
Option 1 ID : 264330603813
Option 2 ID : 264330603814
Option 3 ID : 264330603812
Option 4 ID : 264330603811
Status : Answered
Chosen Option : 2

Q.19 Two trains of length 200 m and 325 m long are running on parallel rail tracks at speeds of 78 km/h and 60 km/h, respectively. In how much time (in seconds) the faster train cross the slower one if they are running in the same direction?

- Ans**
- 1. 105
 - 2. 100
 - 3. 115
 - 4. 110

Question ID : 264330156233
Option 1 ID : 264330612332
Option 2 ID : 264330612331
Option 3 ID : 264330612334
Option 4 ID : 264330612333
Status : Answered
Chosen Option : 1

Q.20 A college student spends 75% of his pocket money. When the pocket money increased by 20%, the expenditure also increased by 15%. What is the increase in the savings?

- Ans**
- 1. 25%
 - 2. 55%
 - 3. 35%
 - 4. 45%

Question ID : 264330154044
Option 1 ID : 264330603640
Option 2 ID : 264330603642
Option 3 ID : 264330603641
Option 4 ID : 264330603639
Status : Answered
Chosen Option : 3

Section : Reasoning Ability and Problem Solving

Q.1 What should come in place of '?' in the given series?

4 22 112 562 2812 ?

- Ans**
- 1. 13423
 - 2. 13948
 - 3. 14062
 - 4. 13684

Question ID : 264330151464
Option 1 ID : 264330593483
Option 2 ID : 264330593485
Option 3 ID : 264330593486
Option 4 ID : 264330593484
Status : Answered
Chosen Option : 3

Q.2 What should come in place of '?' in the given series?

16 110 ? 5374 37616 263310 1843168

- Ans
- 1. 792
 - 2. 800
 - 3. 804
 - 4. 768

Question ID : 264330151481
 Option 1 ID : 264330593552
 Option 2 ID : 264330593553
 Option 3 ID : 264330593554
 Option 4 ID : 264330593551

Status : Answered

Chosen Option : 4

Q.3 Read the given statements and conclusions carefully. You have to take the given statements to be true even if they seem to be at variance from commonly known facts. You have to decide which conclusion/s logically follow/s from the given statements.

Statements: All ropes are forks. Some forks are spoons. Some spoons are chopsticks.

Conclusion I: Some ropes are spoons.

Conclusion II: All forks are chopsticks.

- Ans
- 1. Only conclusion (II) is follow.
 - 2. Only conclusion (I) is follow.
 - 3. Both conclusions (I) and (II) are follow.
 - 4. Neither conclusion (I) nor (II) is follow.

Question ID : 264330155927
 Option 1 ID : 264330611112
 Option 2 ID : 264330611111
 Option 3 ID : 264330611114
 Option 4 ID : 264330611113

Status : Answered

Chosen Option : 4

Q.4 In the following number-pairs, the second number is obtained by applying certain mathematical operations to the first number. Select the set in which the numbers are related in the same way as are the numbers of the following sets.
 (NOTE: Operations should be performed on the whole numbers, without breaking down the numbers into its constituent digits. E.g. 13 – Operations on 13 such as adding /deleting /multiplying etc. to 13 can be performed. Breaking down 13 into 1 and 3 and then performing mathematical operations on 1 and 3 is not allowed)

8 : 50
 4 : 30

- Ans
- 1. 20 : 40
 - 2. 6 : 20
 - 3. 7 : 45
 - 4. 5 : 8

Question ID : 264330154646
 Option 1 ID : 264330606050
 Option 2 ID : 264330606048
 Option 3 ID : 264330606047
 Option 4 ID : 264330606049

Status : Marked For Review

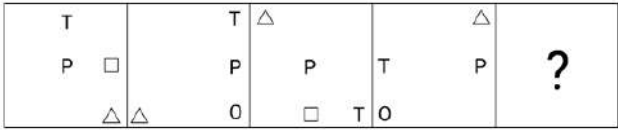
Chosen Option : 2

Q.5 What will come in the place of '?' in the following equation, if '+' and '-' are interchanged and '×' and '÷' are interchanged?
 $729 \times 81 - 96 \div 13 + 8 = ?$

- Ans**
- ✓ 1. 1
 - ✗ 2. 11
 - ✗ 3. 8
 - ✗ 4. 9

Question ID : 264330155680
 Option 1 ID : 264330610124
 Option 2 ID : 264330610123
 Option 3 ID : 264330610126
 Option 4 ID : 264330610125
 Status : Answered
 Chosen Option : 1

Q.6 Which figure should replace the question mark (?) if the following figure series were to be continued?



Ans

- ✗ 1.

O	P	T
		△
- ✗ 2.

□	P	△
		T
- ✗ 3.

	T	O
P		
		△
- ✓ 4.

□	P	T
		△

Question ID : 264330154758
 Option 1 ID : 264330606497
 Option 2 ID : 264330606495
 Option 3 ID : 264330606496
 Option 4 ID : 264330606498
 Status : Answered
 Chosen Option : 4

Q.7 In a certain code language, 'COIN' is coded as '9735' and 'ONCE' is coded as '3459'. What is the code for 'E' in the given code language?

- Ans**
- 1. 5
 - 2. 3
 - 3. 4
 - 4. 9

Question ID : 264330151693

Option 1 ID : 264330594402

Option 2 ID : 264330594400

Option 3 ID : 264330594399

Option 4 ID : 264330594401

Status : Answered

Chosen Option : 3

Q.8 Read the given statements and conclusions carefully. You have to take the given statements to be true even if they seem to be at variance from commonly known facts. You have to decide which conclusion/s logically follow/s from the given statements.

Statements: All computers are laptops. Some laptops are heavy. All heavy is wood.

Conclusion I: All laptops are computers.

Conclusion II: Some heavy are laptops.

- Ans**
- 1. Neither conclusion (I) nor (II) is follow.
 - 2. Only conclusion (I) is follow.
 - 3. Both conclusions (I) and (II) are follow.
 - 4. Only conclusion (II) is follow.

Question ID : 264330155908

Option 1 ID : 264330611037

Option 2 ID : 264330611035

Option 3 ID : 264330611038

Option 4 ID : 264330611036

Status : Answered

Chosen Option : 4

Q.9 Six people, Karan, Dilip, Rahul, Prabhat, Alok and Sandeep are sitting in a straight line, facing north. Karan sits 2nd from the left end. Dilip sits 3rd to the right of Karan. Rahul sits 2nd to the left of Dilip. Prabhat sits 3rd to the right of Rahul. Sandeep sits 2nd to the left of Prabhat. Who sits 2nd to the right of Karan?

- Ans**
- 1. Rahul
 - 2. Sandeep
 - 3. Prabhat
 - 4. Alok

Question ID : 264330161848

Option 1 ID : 264330634720

Option 2 ID : 264330634721

Option 3 ID : 264330634722

Option 4 ID : 264330634719

Status : Answered

Chosen Option : 2

Q.10 What should come in place of ? in the given series based on the English alphabetical order?

MAG, QXE, UUC, YRA, ?

- Ans**
- 1. CNX
 - 2. COY
 - 3. DNY
 - 4. DMX

Question ID : 264330155806

Option 1 ID : 264330610630

Option 2 ID : 264330610627

Option 3 ID : 264330610629

Option 4 ID : 264330610628

Status : Answered

Chosen Option : 2

Q.11 In the following number-pairs, the second number is obtained by applying certain mathematical operations to the first number. Select the set in which the numbers are related in the same way as are the numbers of the following sets.

(NOTE: Operations should be performed on the whole numbers, without breaking down the numbers into its constituent digits. E.g. 13 – Operations on 13 such as adding / subtracting / multiplying etc. to 13 can be performed.

Breaking down 13 into 1 and 3 and then performing mathematical operations on 1 and 3 is not allowed)

5, 128

9, 732

- Ans**
- 1. 5, 50
 - 2. 3, 30
 - 3. 4, 46
 - 4. 2, 13

Question ID : 264330151620

Option 1 ID : 264330594110

Option 2 ID : 264330594108

Option 3 ID : 264330594109

Option 4 ID : 264330594107

Status : Answered

Chosen Option : 2

Q.12 What should come in place of '?' in the given series?

5 15 35 75 155 ?

- Ans**
- 1. 315
 - 2. 305
 - 3. 325
 - 4. 335

Question ID : 264330151456

Option 1 ID : 264330593452

Option 2 ID : 264330593451

Option 3 ID : 264330593453

Option 4 ID : 264330593454

Status : Answered

Chosen Option : 1

Q.13 Select the correct mirror image of the given figure when the mirror is placed at MN as shown below.



- Ans
- 1.
 - 2.
 - 3.
 - 4.

Question ID : 264330151528

Option 1 ID : 264330593739

Option 2 ID : 264330593741

Option 3 ID : 264330593740

Option 4 ID : 264330593742

Status : Answered

Chosen Option : 3

Q.14 What will come in the place of the question mark (?) in the following equation, if '+' and '-' are interchanged and 'x' and '÷' are interchanged?
 $39 + 5 + 8 - 99 \times 9 = ?$

- Ans
- 1. 168
 - 2. 198
 - 3. 158
 - 4. 178

Question ID : 264330154614

Option 1 ID : 264330605920

Option 2 ID : 264330605922

Option 3 ID : 264330605919

Option 4 ID : 264330605921

Status : Answered

Chosen Option : 2

Q.15 What should come in place of the question mark (?) in the given series based on the English alphabetical order?

EMT, ILX, MKB, QJF, ?

- Ans
- 1. UHL
 - 2. VJL
 - 3. UIJ
 - 4. VHK

Question ID : 264330156300

Option 1 ID : 264330612599

Option 2 ID : 264330612600

Option 3 ID : 264330612602

Option 4 ID : 264330612601

Status : Answered

Chosen Option : 3

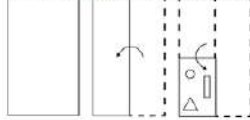
Q.16 What should come in place of ? in the given series based on the English alphabetical order?

NBE, JXA, FTW, BPS, ?

- Ans**
- 1. XMP
 - 2. YMN
 - 3. XLO
 - 4. YNP

Question ID : 264330155771
 Option 1 ID : 264330610490
 Option 2 ID : 264330610488
 Option 3 ID : 264330610489
 Option 4 ID : 264330610487
 Status : Answered
 Chosen Option : 3

Q.17 The sequence of folding a piece of paper and the manner in which the folded paper is cut is shown in the following figures. How would this paper look when unfolded?



- Ans**
- 1.
 - 2.
 - 3.
 - 4.

Question ID : 264330155607
 Option 1 ID : 264330609831
 Option 2 ID : 264330609834
 Option 3 ID : 264330609832
 Option 4 ID : 264330609833
 Status : Answered
 Chosen Option : 1

Q.18 In a certain code language, 'BLANCH' is coded as '36' and 'ARAB' is coded as '24'. What is the code for 'CORRECT' in the given code language?

- Ans
- 1. 41
 - 2. 39
 - 3. 42
 - 4. 40

Question ID : **264330155825**
Option 1 ID : **264330610704**
Option 2 ID : **264330610706**
Option 3 ID : **264330610703**
Option 4 ID : **264330610705**
Status : **Answered**
Chosen Option : **3**

Q.19 DKJE is related to IPOJ in a certain way based on the English alphabetical order. In the same way, GTSM is related to LYXR. To which of the following is RBNF related to, following the same logic?

- Ans
- 1. WGSK
 - 2. XERJ
 - 3. WEQK
 - 4. VGQI

Question ID : **264330151656**
Option 1 ID : **264330594253**
Option 2 ID : **264330594254**
Option 3 ID : **264330594251**
Option 4 ID : **264330594252**
Status : **Answered**
Chosen Option : **1**

Q.20 The position of how many letters will remain unchanged if each of the letter in the word 'BACHELOR' is arranged in alphabetical order?

- Ans
- 1. One
 - 2. Five
 - 3. Four
 - 4. Two

Question ID : **264330154324**
Option 1 ID : **264330604759**
Option 2 ID : **264330604761**
Option 3 ID : **264330604760**
Option 4 ID : **264330604762**
Status : **Answered**
Chosen Option : **3**

Q.1 The Padma Shri awardee Guru K Kalyanasundaram Pillai, the man who is keeping an ancient tradition alive, was awarded the Padma Shri 2023 for his contribution to the field of _____.

- Ans
- 1. Kuchipudi
 - 2. Kathakali
 - 3. Bharatanatyam
 - 4. Mohiniyattam

Question ID : 264330160805
Option 1 ID : 264330630551
Option 2 ID : 264330630554
Option 3 ID : 264330630553
Option 4 ID : 264330630552
Status : Answered
Chosen Option : 3

Q.2 Who appoints the State Election Commissioner?

- Ans
- 1. Governor
 - 2. Speaker
 - 3. Chief Minister
 - 4. Advocate General

Question ID : 264330159924
Option 1 ID : 264330627043
Option 2 ID : 264330627045
Option 3 ID : 264330627044
Option 4 ID : 264330627046
Status : Answered
Chosen Option : 1

Q.3 In which river has the National Waterways-2 (NW-2) been developed in India?

- Ans
- 1. Brahmaputra
 - 2. Krishna
 - 3. Ganga
 - 4. Narmada

Question ID : 264330161512
Option 1 ID : 264330633377
Option 2 ID : 264330633376
Option 3 ID : 264330633378
Option 4 ID : 264330633375
Status : Answered
Chosen Option : 1

Q.4 In India, Micro Finance Institutions primarily target which segment of the population?

- Ans
- 1. Non-resident Indians (NRIs)
 - 2. Large corporations
 - 3. Low-income individuals and small businesses
 - 4. High-income individuals

Question ID : 264330157287
Option 1 ID : 264330616514
Option 2 ID : 264330616512
Option 3 ID : 264330616513
Option 4 ID : 264330616511
Status : Answered
Chosen Option : 3

Q.5 What is the name of the scheme launched by Himachal Pradesh government for dairy farmers?

- Ans**
- 1. Dhugdh Dhan
 - 2. Pashu Poshan
 - 3. Dhoodh aur Dhan
 - 4. Sanjeevani

Question ID : 264330158327
Option 1 ID : 264330620669
Option 2 ID : 264330620667
Option 3 ID : 264330620670
Option 4 ID : 264330620668
Status : Answered
Chosen Option : 3

Q.6 Which of the following States will host the 37th National Games?

- Ans**
- 1. Odisha
 - 2. Andhra Pradesh
 - 3. Goa
 - 4. Karnataka

Question ID : 264330161150
Option 1 ID : 264330631934
Option 2 ID : 264330631932
Option 3 ID : 264330631933
Option 4 ID : 264330631931
Status : Answered
Chosen Option : 2

Q.7 Kalidas Samman is a prestigious arts award presented annually by the government of _____.

- Ans**
- 1. Madhya Pradesh
 - 2. Rajasthan
 - 3. Kerala
 - 4. Karnataka

Question ID : 264330161911
Option 1 ID : 264330634973
Option 2 ID : 264330634974
Option 3 ID : 264330634971
Option 4 ID : 264330634972
Status : Answered
Chosen Option : 1

Q.8 How many countries will participate in ICC 2023 ODI Cricket World Cup?

- Ans
- 1. 12
 - 2. 10
 - 3. 6
 - 4. 8

Question ID : 264330158226
Option 1 ID : 264330620266
Option 2 ID : 264330620265
Option 3 ID : 264330620263
Option 4 ID : 264330620264
Status : Answered
Chosen Option : 2

Q.9 Whose autobiography is titled 'Born Again on the Mountain: a story of losing everything and finding it back'?

- Ans
- 1. Bachendri Pal
 - 2. Dicky Dolma
 - 3. Santosh Yadav
 - 4. Arunima Sinha

Question ID : 264330155451
Option 1 ID : 264330609207
Option 2 ID : 264330609209
Option 3 ID : 264330609210
Option 4 ID : 264330609208
Status : Answered
Chosen Option : 4

Q.10 Which of the following is NOT a characteristic of money?

- Ans
- 1. Portability
 - 2. Perishability
 - 3. Divisibility
 - 4. Durability

Question ID : 264330157303
Option 1 ID : 264330616576
Option 2 ID : 264330616578
Option 3 ID : 264330616577
Option 4 ID : 264330616575
Status : Answered
Chosen Option : 2

Q.11 Among the given options, which one causes an echo?

- Ans
- 1. When sound is reflected
 - 2. When sound waves travel through a solid medium
 - 3. When sound waves travel through a liquid medium
 - 4. When sound waves travel through a vacuum

Question ID : 264330157786
Option 1 ID : 264330618506
Option 2 ID : 264330618505
Option 3 ID : 264330618504
Option 4 ID : 264330618503
Status : Answered
Chosen Option : 1

Q.12 _____ has two traditions: one is the sankeertana (which is the devotional aspect) and the other is the raasa.

- Ans
- 1. Odissi
 - 2. Sattriya
 - 3. Manipuri dance
 - 4. Chhau

Question ID : 264330160791
Option 1 ID : 264330630495
Option 2 ID : 264330630496
Option 3 ID : 264330630498
Option 4 ID : 264330630497
Status : Not Answered
Chosen Option : --

Q.13 Which of the following lakes is a saltwater lake ?

- Ans
- 1. Superior
 - 2. Chilika
 - 3. Malawi
 - 4. Titicaca

Question ID : 264330161325
Option 1 ID : 264330632628
Option 2 ID : 264330632627
Option 3 ID : 264330632629
Option 4 ID : 264330632630
Status : Answered
Chosen Option : 2

Q.14 'Wings of Fire' is an autobiography of whom?

- Ans
- 1. Ratan Tata
 - 2. Indira Gandhi
 - 3. Subhash Chandra Bose
 - 4. APJ Abdul Kalam

Question ID : 264330155491
Option 1 ID : 264330609370
Option 2 ID : 264330609369
Option 3 ID : 264330609368
Option 4 ID : 264330609367
Status : Answered
Chosen Option : 4

Q.15 The _____ of the Indian Constitution defines the Fundamental Duties of Indian Citizens.

- Ans
- 1. Article 51A
 - 2. Article 41B
 - 3. Article 49C
 - 4. Article 21A

Question ID : 264330162245
Option 1 ID : 264330636310
Option 2 ID : 264330636308
Option 3 ID : 264330636309
Option 4 ID : 264330636307
Status : Answered
Chosen Option : 1

Q.16 Dr. Bhupendra Kumar Hazarika won the Bharat Ratna award in the field of _____ in 2019.

- Ans
- 1. Literature
 - 2. Music
 - 3. Games
 - 4. Science

Question ID : 264330155506
Option 1 ID : 264330609428
Option 2 ID : 264330609429
Option 3 ID : 264330609430
Option 4 ID : 264330609427
Status : Answered
Chosen Option : 1

Q.17 What type of vegetation is represented by Sundarbans, the world's largest delta located in the Bay of Bengal?

- Ans
- 1. Tropical Thorn Forests
 - 2. Montane Forests
 - 3. Mangrove Forests
 - 4. Semi Evergreen Forests

Question ID : 264330160994
Option 1 ID : 264330631310
Option 2 ID : 264330631309
Option 3 ID : 264330631308
Option 4 ID : 264330631307
Status : Answered
Chosen Option : 3

Q.18 The Mumbai High region in Arabian Sea is known for mining _____.

- Ans
- 1. uranium
 - 2. coal
 - 3. copper
 - 4. mineral oil

Question ID : 264330161526
Option 1 ID : 264330633431
Option 2 ID : 264330633434
Option 3 ID : 264330633432
Option 4 ID : 264330633433
Status : Answered
Chosen Option : 2

Q.19 In which of the following years was the Child Marriage Restraint Act passed?

- Ans
- 1. 1949
 - 2. 1939
 - 3. 1950
 - 4. 1929

Question ID : 264330161751
Option 1 ID : 264330634333
Option 2 ID : 264330634332
Option 3 ID : 264330634334
Option 4 ID : 264330634331
Status : Answered
Chosen Option : 3

Q.20 According to the Census of India 2011, identify the correct pair of State and Union Territories which recorded the highest literacy rate.

- Ans**
- 1. Mizoram and Lakshadweep
 - 2. Kerala and Chandigarh
 - 3. Goa and Puducherry
 - 4. Kerala and Lakshadweep

Question ID : 264330161558
Option 1 ID : 264330633559
Option 2 ID : 264330633561
Option 3 ID : 264330633562
Option 4 ID : 264330633560
Status : Answered
Chosen Option : 4

Q.21 The sal tree assumes great significance in a number of tribal communities scattered across eastern India. For instance, _____ festival is celebrated in honour of the tree in Jharkhand.

- Ans**
- 1. Karma
 - 2. Tusu Parab
 - 3. Sarhul
 - 4. Sohrai

Question ID : 264330160836
Option 1 ID : 264330630677
Option 2 ID : 264330630678
Option 3 ID : 264330630676
Option 4 ID : 264330630675
Status : Answered
Chosen Option : 3

Q.22 Geto Sora won the Arena Junior (Boys) International Badminton Championship. He belongs to which state?

- Ans**
- 1. Arunachal Pradesh
 - 2. Mizoram
 - 3. Sikkim
 - 4. Meghalaya

Question ID : 264330158369
Option 1 ID : 264330620836
Option 2 ID : 264330620837
Option 3 ID : 264330620838
Option 4 ID : 264330620835
Status : Answered
Chosen Option : 4

Q.23 Identify the Chhau dancer from the following, who received the Sangeet Natak Akademi Award-2021 (given in February 2023)?

- Ans**
- 1. Bharathi Vithal
 - 2. Kumkum Dhar
 - 3. Bhuvan Kumar
 - 4. Rabindra Atibudhi

Question ID : 264330155519
Option 1 ID : 264330609481
Option 2 ID : 264330609480
Option 3 ID : 264330609479
Option 4 ID : 264330609482
Status : Answered
Chosen Option : 2

Q.24 Which of the following Indian musicians was referred to as 'Ghazal King'?

- Ans**
- 1. Ghulam Ali
 - 2. Jagjit Singh
 - 3. Pankaj Udhas
 - 4. Mehdi Hassan

Question ID : 264330161774
Option 1 ID : 264330634424
Option 2 ID : 264330634426
Option 3 ID : 264330634425
Option 4 ID : 264330634423
Status : Answered
Chosen Option : 1

Q.25 On 8th April 1929, who among the following two revolutionists threw a bomb in the Central Legislative Assembly?

- Ans**
- 1. Bhagat Singh and Rajguru
 - 2. Bhagat Singh and Ram Prasad Bismil
 - 3. Bhagat Singh and Batukeshwar Dutt
 - 4. Bhagat Singh and Sukhdev

Question ID : 264330161746
Option 1 ID : 264330634313
Option 2 ID : 264330634312
Option 3 ID : 264330634311
Option 4 ID : 264330634314
Status : Answered
Chosen Option : 1

Q.1 Select the option that can be used as a one-word substitute for the given group of words.

To go away suddenly and secretly in order to escape from somewhere

- Ans 1. Abscond
 2. Vanish
 3. Excavate
 4. Extradite

Question ID : 264330151871
Option 1 ID : 264330595106
Option 2 ID : 264330595104
Option 3 ID : 264330595103
Option 4 ID : 264330595105
Status : Answered
Chosen Option : 1

Q.2 Select the most appropriate meaning of the underlined idiom.
My friend's business has grown by leaps and bounds.

- Ans 1. rapidly
 2. aimlessly
 3. perfectly
 4. slowly

Question ID : 264330152751
Option 1 ID : 264330598603
Option 2 ID : 264330598606
Option 3 ID : 264330598605
Option 4 ID : 264330598604
Status : Answered
Chosen Option : 1

Q.3 Select the most appropriate option that can substitute the underlined segment in the given sentence.

Peer pressure is bound to effect most of us both positively and negatively.

- Ans 1. to invoke most of us
 2. to affect most of us
 3. to impede most of us
 4. to prompt most of us

Question ID : 264330151809
Option 1 ID : 264330594865
Option 2 ID : 264330594863
Option 3 ID : 264330594866
Option 4 ID : 264330594864
Status : Answered
Chosen Option : 2

Q.4 Select the most appropriate synonym of the given word.
Peculiar

- Ans** 1. Neat
 2. Normal
 3. Strange
 4. Jovial

Question ID : 264330151923
Option 1 ID : 264330595309
Option 2 ID : 264330595308
Option 3 ID : 264330595307
Option 4 ID : 264330595310
Status : Answered
Chosen Option : 3

Q.5 Select the sentence that has NO spelling errors.

- Ans** 1. The teacher was impressed with the student's insightfull analysis of the novel, which demonstrated a deep understanding of the complex theames and motifs.
 2. The teacher was impressed with the student's insightful analysis of the novel, which demonstrated a deep understanding of the complex themes and motifs.
 3. The teacher was impressed with the student's insightul analysis of the novel, which demonstrated a deep understanding of the complex themes and motifs.
 4. The teacher was impressed with the student's insightful analysis of the novel, which demonstredted a deep understanding of the complex themes and motifs.

Question ID : 264330152650
Option 1 ID : 264330598205
Option 2 ID : 264330598206
Option 3 ID : 264330598204
Option 4 ID : 264330598203
Status : Answered
Chosen Option : 2

Q.6 Select the INCORRECTLY spelt word.

- Ans** 1. Beginning
 2. Writting
 3. Argument
 4. Amateur

Question ID : 264330152646
Option 1 ID : 264330598189
Option 2 ID : 264330598187
Option 3 ID : 264330598190
Option 4 ID : 264330598188
Status : Answered
Chosen Option : 4

Q.7 Select the most appropriate meaning of the underlined idiom in the following sentence.

Tim joined the family business as he failed in his final degree examination. Seeing the growth of the family business now, it seems like Tim's earlier failure was a blessing in disguise.

- Ans**
- 1. A difficult time
 - 2. A mistake
 - 3. Something good that isn't recognised at first
 - 4. A good decision

Question ID : 264330153047
Option 1 ID : 264330599756
Option 2 ID : 264330599755
Option 3 ID : 264330599757
Option 4 ID : 264330599758
Status : Answered
Chosen Option : 3

Q.8 The following sentence has been split into four segments. Identify the segment that contains a grammatical error and select the option which rectifies that error.

AI fiction is a constantly / evolving genre that gives us an peek / into the potential upsides and downsides / of intelligent machines.

- Ans**
- 1. AI fiction is an constantly
 - 2. into a potential upside and downside
 - 3. evolving genre that gives us a peek
 - 4. of intelligent machine.

Question ID : 264330141341
Option 1 ID : 264330553701
Option 2 ID : 264330553702
Option 3 ID : 264330553699
Option 4 ID : 264330553700
Status : Answered
Chosen Option : 3

Q.9 Parts of the following sentence have been underlined and given as options. Select the option that contains an error.

If he will come early, we will leave on time.

- Ans**
- 1. will come
 - 2. If he
 - 3. on time
 - 4. we will

Question ID : 264330144888
Option 1 ID : 264330567808
Option 2 ID : 264330567807
Option 3 ID : 264330567810
Option 4 ID : 264330567809
Status : Answered
Chosen Option : 1

Q.10 Select the most appropriate meaning of the underlined idiom in the following sentence.

I ordered a dozen doughnuts, but the kind baker gave me a baker's dozen.

- Ans
- 1. A group of 12 bakery items
 - 2. A group of 12 bakers
 - 3. A group of 13
 - 4. A group of 12

Question ID : 264330153076
Option 1 ID : 264330599869
Option 2 ID : 264330599870
Option 3 ID : 264330599867
Option 4 ID : 264330599868
Status : Answered
Chosen Option : 3

Q.11 Parts of the following sentence have been underlined and given as options. Select the option that contains an error.

They had two bedrooms among them, one for the girls and one for the boys.

- Ans
- 1. girls and one
 - 2. them, one for
 - 3. bedrooms among
 - 4. had two

Question ID : 264330153210
Option 1 ID : 264330600401
Option 2 ID : 264330600399
Option 3 ID : 264330600402
Option 4 ID : 264330600400
Status : Answered
Chosen Option : 1

Q.12 Select the INCORRECTLY spelt word.

- Ans
- 1. Adopt
 - 2. Advertisement
 - 3. Contantment
 - 4. Container

Question ID : 264330152945
Option 1 ID : 264330599360
Option 2 ID : 264330599359
Option 3 ID : 264330599361
Option 4 ID : 264330599362
Status : Answered
Chosen Option : 3

Q.13 Select the most appropriate ANTONYM of the given word.
Wisdom

- Ans 1. Stupidity
 2. Experience
 3. Modesty
 4. Intelligence

Question ID : 264330152657
Option 1 ID : 264330598232
Option 2 ID : 264330598233
Option 3 ID : 264330598234
Option 4 ID : 264330598231
Status : Answered
Chosen Option : 1

Q.14 Select the option that will improve the underlined part of the given sentence. In case no improvement is needed, select 'No improvement required'.
Jack being the wiser and bolder among the two of us, took the lead, carrying the axe on his shoulder.

- Ans 1. bolder between
 2. boldest among
 3. No improvement required
 4. boldest between

Question ID : 264330153199
Option 1 ID : 264330600356
Option 2 ID : 264330600355
Option 3 ID : 264330600358
Option 4 ID : 264330600357
Status : Answered
Chosen Option : 1

Q.15 Select the option that can be used as a one-word substitute for the underlined group of words.
Many people fought to put an end to slavery during the civil war.

- Ans 1. abolish
 2. absorb
 3. abide
 4. abduct

Question ID : 264330152705
Option 1 ID : 264330598421
Option 2 ID : 264330598419
Option 3 ID : 264330598422
Option 4 ID : 264330598420
Status : Answered
Chosen Option : 1

Q.16 Select the most appropriate ANTONYM of the word given in brackets to fill in the blank.

The doctor said that the patient named Rumi is in the _____ (initial) stage of lung cancer.

- Ans
- 1. terminal
 - 2. innermost
 - 3. early
 - 4. outermost

Question ID : 264330152695
Option 1 ID : 264330598386
Option 2 ID : 264330598383
Option 3 ID : 264330598384
Option 4 ID : 264330598385
Status : Answered
Chosen Option : 4

Q.17 Select the most appropriate option to fill in the blank.
He generally avoids arguments as he is _____ by nature.

- Ans
- 1. questionable
 - 2. reliable
 - 3. quick-minded
 - 4. peaceful

Question ID : 264330153549
Option 1 ID : 264330601697
Option 2 ID : 264330601698
Option 3 ID : 264330601695
Option 4 ID : 264330601696
Status : Answered
Chosen Option : 4

Q.18 Select the most appropriate option that can substitute the underlined segment in the given sentence. If there is no need to substitute it, select 'No substitution required'.
The pandemic has challenged education systems to ensure learning continuity, substantially increasing the demands placed on teachers.

- Ans
- 1. education systems to ensuring learning
 - 2. education systems for ensure learning
 - 3. education systems in ensure learning
 - 4. No substitution required

Question ID : 264330151901
Option 1 ID : 264330595219
Option 2 ID : 264330595221
Option 3 ID : 264330595220
Option 4 ID : 264330595222
Status : Answered
Chosen Option : 4

Q.19 Select the most appropriate idiom from the given options to fill in the blank.
We broke the traffic rules unknowingly while coming back from the party, now we have to _____ sooner or later.

- Ans 1. face the music
 2. look sharp
 3. cry for the moon
 4. bid defiance

Question ID : 264330152687
 Option 1 ID : 264330598354
 Option 2 ID : 264330598353
 Option 3 ID : 264330598351
 Option 4 ID : 264330598352
 Status : Answered
 Chosen Option : 1

Q.20 The following sentence has been split into four segments. Identify the segment that contains a grammatical error.

Guard over / making mistakes / by carefully checking / the assigned task.

- Ans 1. Guard over
 2. by carefully checking
 3. the assigned task
 4. making mistakes

Question ID : 264330155428
 Option 1 ID : 264330609119
 Option 2 ID : 264330609121
 Option 3 ID : 264330609122
 Option 4 ID : 264330609120
 Status : Answered
 Chosen Option : 2

Comprehension:

In the following passage some words have been deleted. Read the passage carefully and select the most appropriate option to fill in each blank.

_____ (1) university or college degree has long been the traditional hallmark of a _____ (2) candidate in the professional arena. While it historically provided the most widely accepted standard of qualification and skill for professionals, many companies today _____ (3) their hiring process and considering a broader list of criteria to judge a candidate's ability. Organisations are reducing their reliance on college degrees as a sole marker of competence and instead placing greater emphasis _____ (4) the practical skills candidates have acquired through work experience. This shift in hiring is of particular relevance to India, which has the _____ (5) youth population in the world.

SubQuestion No : 21

Q.21 Select the most appropriate option to fill in blank number 1.

- Ans 1. The
 2. That
 3. A
 4. An

Question ID : 264330152766
 Option 1 ID : 264330598657
 Option 2 ID : 264330598658
 Option 3 ID : 264330598655
 Option 4 ID : 264330598656
 Status : Answered
 Chosen Option : 1

Comprehension:

In the following passage some words have been deleted. Read the passage carefully and select the most appropriate option to fill in each blank.

_____ (1) university or college degree has long been the traditional hallmark of a
_____ (2) candidate in the professional arena. While it historically provided the most widely accepted standard of qualification and skill for professionals, many companies today
_____ (3) their hiring process and considering a broader list of criteria to judge a candidate's ability. Organisations are reducing their reliance on college degrees as a sole marker of competence and instead placing greater emphasis _____ (4) the practical skills candidates have acquired through work experience. This shift in hiring is of particular relevance to India, which has the _____ (5) youth population in the world.

SubQuestion No : 22

Q.22 Select the most appropriate option to fill in blank number 2.

- Ans 1. was qualify
 2. qualify
 3. qualification
 4. qualified

Question ID : 264330152767

Option 1 ID : 264330598662

Option 2 ID : 264330598660

Option 3 ID : 264330598661

Option 4 ID : 264330598659

Status : Answered

Chosen Option : 4

Comprehension:

In the following passage some words have been deleted. Read the passage carefully and select the most appropriate option to fill in each blank.

_____ (1) university or college degree has long been the traditional hallmark of a
_____ (2) candidate in the professional arena. While it historically provided the most widely accepted standard of qualification and skill for professionals, many companies today
_____ (3) their hiring process and considering a broader list of criteria to judge a candidate's ability. Organisations are reducing their reliance on college degrees as a sole marker of competence and instead placing greater emphasis _____ (4) the practical skills candidates have acquired through work experience. This shift in hiring is of particular relevance to India, which has the _____ (5) youth population in the world.

SubQuestion No : 23

Q.23 Select the most appropriate option to fill in blank number 3.

- Ans 1. was changed
 2. was changing
 3. changing
 4. are changing

Question ID : 264330152768

Option 1 ID : 264330598663

Option 2 ID : 264330598664

Option 3 ID : 264330598666

Option 4 ID : 264330598665

Status : Answered

Chosen Option : 4

Comprehension:

In the following passage some words have been deleted. Read the passage carefully and select the most appropriate option to fill in each blank.

_____ (1) university or college degree has long been the traditional hallmark of a
_____ (2) candidate in the professional arena. While it historically provided the most widely accepted standard of qualification and skill for professionals, many companies today
_____ (3) their hiring process and considering a broader list of criteria to judge a candidate's ability. Organisations are reducing their reliance on college degrees as a sole marker of competence and instead placing greater emphasis _____ (4) the practical skills candidates have acquired through work experience. This shift in hiring is of particular relevance to India, which has the _____ (5) youth population in the world.

SubQuestion No : 24

Q.24 Select the most appropriate option to fill in blank number 4.

- Ans 1. about
 2. for
 3. with
 4. on

Question ID : 264330152769

Option 1 ID : 264330598669

Option 2 ID : 264330598670

Option 3 ID : 264330598668

Option 4 ID : 264330598667

Status : Answered

Chosen Option : 4

Comprehension:

In the following passage some words have been deleted. Read the passage carefully and select the most appropriate option to fill in each blank.

_____ (1) university or college degree has long been the traditional hallmark of a
_____ (2) candidate in the professional arena. While it historically provided the most widely accepted standard of qualification and skill for professionals, many companies today
_____ (3) their hiring process and considering a broader list of criteria to judge a candidate's ability. Organisations are reducing their reliance on college degrees as a sole marker of competence and instead placing greater emphasis _____ (4) the practical skills candidates have acquired through work experience. This shift in hiring is of particular relevance to India, which has the _____ (5) youth population in the world.

SubQuestion No : 25

Q.25 Select the most appropriate option to fill in blank number 5.

- Ans 1. largest
 2. longest
 3. biggest
 4. most highest

Question ID : 264330152770

Option 1 ID : 264330598673

Option 2 ID : 264330598674

Option 3 ID : 264330598672

Option 4 ID : 264330598671

Status : Answered

Chosen Option : 1

SSC MTS 2023 Tier 1 Sept 4 Shift 2 Question Paper with Answers

Roll Number	
Candidate Name	
Exam Date	04/09/2023
Exam Time	12:30 PM - 2:30 PM
Subject	MTS Non Tech Havaladar CBIC and CBN Examination 2023

Section : Numerical and Mathematical Ability

Q.1 A sum invested at the rate of 6% simple interest per annum grows to ₹1,13,880 in 5 years. What is the simple interest, if the same amount is invested for 8 years at the rate of 9% per annum?

- Ans 1. ₹63,072
 2. ₹60,565
 3. ₹65,392
 4. ₹58,050

Question ID : 264330158753

Option 1 ID : 264330622371

Option 2 ID : 264330622374

Option 3 ID : 264330622373

Option 4 ID : 264330622372

Status : Answered

Chosen Option : 1

Q.2 Find the compound interest (Compounded annually) on ₹2,000 for $2\frac{1}{2}$ years at 10% per annum.

- Ans 1. ₹ 561
 2. ₹ 500
 3. ₹ 521
 4. ₹ 541

Question ID : 264330156078

Option 1 ID : 264330611711

Option 2 ID : 264330611713

Option 3 ID : 264330611714

Option 4 ID : 264330611712

Status : Answered

Chosen Option : 3

Q.3 Study the given table and answer the question that follows.
The table shows the number of voters in four different villages P, Q, R, S.

Villages	Total number of registered voters	Percentage of people who voted (Out of the total number of registered voters)
P	1100	68
Q	1450	62
R	1200	73
S	1124	87

The number of people who did not vote in village P is what percentage more than that who did not vote in village R?

- Ans
1. $6\frac{52}{81}\%$
2. $8\frac{52}{81}\%$
3. $7\frac{52}{81}\%$
4. $9\frac{52}{81}\%$

Question ID : 264330157907

Option 1 ID : 264330618987

Option 2 ID : 264330618989

Option 3 ID : 264330618988

Option 4 ID : 264330618990

Status : Answered

Chosen Option : 3

Q.4 Find the total surface area of a cuboid whose dimensions are 18 m, 6 m and 3 m.

- Ans
1. 90 m^2
2. 180 m^2
3. 324 m^2
4. 360 m^2

Question ID : 264330153898

Option 1 ID : 264330603056

Option 2 ID : 264330603055

Option 3 ID : 264330603058

Option 4 ID : 264330603057

Status : Answered

Chosen Option : 4

Q.5 Yug covers a certain distance with a speed of 56 km/h in $\frac{3}{2}$ hours. If he wants to cover the same distance in 7 hours, what would be his speed (in km/h)?

- Ans**
- 1. 16
 - 2. 20
 - 3. 14
 - 4. 12

Question ID : 264330155752
Option 1 ID : 264330610413
Option 2 ID : 264330610414
Option 3 ID : 264330610412
Option 4 ID : 264330610411
Status : Answered
Chosen Option : 4

Q.6 Vikram saves 13% of his monthly salary. If his monthly expenditure is ₹5,220, then his monthly savings is:

- Ans**
- 1. ₹680
 - 2. ₹580
 - 3. ₹349
 - 4. ₹780

Question ID : 264330156430
Option 1 ID : 264330613112
Option 2 ID : 264330613114
Option 3 ID : 264330613111
Option 4 ID : 264330613113
Status : Answered
Chosen Option : 4

Q.7 20 men can complete a piece of work in 40 days, and 40 women can do the same work in 60 days. If 10 men and 20 women work together, then in how many days will the work be completed?

- Ans**
- 1. 60
 - 2. 50
 - 3. 48
 - 4. 40

Question ID : 264330156012
Option 1 ID : 264330611447
Option 2 ID : 264330611450
Option 3 ID : 264330611449
Option 4 ID : 264330611448
Status : Answered
Chosen Option : 3

Q.8 A grocery seller mixes two varieties of tea costing ₹300 per kg and ₹160 per kg in such a ratio that by selling this mixture at the rate of ₹187 per kg the shopkeeper earns 10% profit. In what respective ratio does the grocery seller mix the two varieties of tea?

- Ans**
- 1. 2 : 13
 - 2. 13 : 3
 - 3. 13 : 2
 - 4. 1 : 13

Question ID : 264330154118

Option 1 ID : 264330603936

Option 2 ID : 264330603937

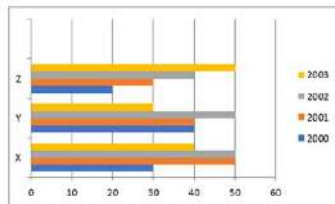
Option 3 ID : 264330603935

Option 4 ID : 264330603938

Status : Answered

Chosen Option : 1

Q.9 The following bar graph indicates the production of cement by 3 companies X, Y and Z during the years 2000 - 2003. The quantity is in lakh bags. Study the bar graph carefully and answer the question.



What is the ratio of the average production of company X during the period 2000 – 2003 to the production of company Y during the same period (in lakh bags).

- Ans**
- 1. 17 : 16
 - 2. 8 : 7
 - 3. 12 : 17
 - 4. 10 : 7

Question ID : 264330153858

Option 1 ID : 264330602897

Option 2 ID : 264330602895

Option 3 ID : 264330602898

Option 4 ID : 264330602896

Status : Answered

Chosen Option : 3

Q.10 The least common multiple (LCM) of p and q is r . The LCM of p^2q and pq^2 is _____.

- Ans**
- 1. pqr^3
 - 2. pqr
 - 3. pq
 - 4. pqr^2

Question ID : 264330156247

Option 1 ID : 264330612390

Option 2 ID : 264330612388

Option 3 ID : 264330612387

Option 4 ID : 264330612389

Status : Answered

Chosen Option : 2

Q.11 Two trains started from a station, at the same time in the same direction, at speeds of 90 km/h and 80 km/h. What will be the distance between the two trains after 5 hours?

- Ans**
- 1. 55 km
 - 2. 50 km
 - 3. 45 km
 - 4. 40 km

Question ID : **264330155971**
Option 1 ID : **264330611285**
Option 2 ID : **264330611283**
Option 3 ID : **264330611286**
Option 4 ID : **264330611284**
Status : **Answered**
Chosen Option : **2**

Q.12 A solid piece of metal, cuboidal in shape, with dimensions 12 cm, 9 cm and 2 cm is recast into a cube. What is the lateral surface area (in cm^2) of the cube?

- Ans**
- 1. 144
 - 2. 216
 - 3. 204
 - 4. 162

Question ID : **264330153793**
Option 1 ID : **264330602636**
Option 2 ID : **264330602635**
Option 3 ID : **264330602638**
Option 4 ID : **264330602637**
Status : **Answered**
Chosen Option : **1**

Q.13 A person buys a table fan for ₹2,800 and sells it at a loss of 12%. What is the selling price of the table fan?

- Ans**
- 1. ₹2,466
 - 2. ₹2,468
 - 3. ₹2,462
 - 4. ₹2,464

Question ID : **264330156220**
Option 1 ID : **264330612281**
Option 2 ID : **264330612282**
Option 3 ID : **264330612279**
Option 4 ID : **264330612280**
Status : **Answered**
Chosen Option : **4**

Q.14 If $A : B = 7 : 9$ and $B : C = 5 : 6$, Find the ratio of C and A respectively.

- Ans**
- 1. 15 : 14
 - 2. 14 : 15
 - 3. 54 : 35
 - 4. 35 : 54

Question ID : 264330153767
Option 1 ID : 264330602534
Option 2 ID : 264330602533
Option 3 ID : 264330602532
Option 4 ID : 264330602531
Status : Answered
Chosen Option : 4

Q.15 The average weight of 17 men is 63 kg and the average weight of 36 women is 54 kg. What is the average weight (in kg) of all the men and women together? (Rounded off to the nearest integer)

- Ans**
- 1. 59
 - 2. 62
 - 3. 57
 - 4. 52

Question ID : 264330155727
Option 1 ID : 264330610312
Option 2 ID : 264330610311
Option 3 ID : 264330610313
Option 4 ID : 264330610314
Status : Answered
Chosen Option : 1

Q.16 A vessel contains liquid A and liquid B in the ratio 4 : 9. If 8 litres of liquid A is added to the vessel, the new ratio becomes 8 : 9. Find the quantity of liquid A (in litres) in the original mixture.

- Ans**
- 1. 12
 - 2. 9
 - 3. 8
 - 4. 6

Question ID : 264330155729
Option 1 ID : 264330610319
Option 2 ID : 264330610320
Option 3 ID : 264330610321
Option 4 ID : 264330610322
Status : Answered
Chosen Option : 3

Q.17 Which of the following expressions has value equal to 0?

- Ans
- 1. $(2 \times 3 + 5 - (1 - 2(3 - 2 \times 2)))$
 - 2. $(2 \times 3 - 5 - (1 + 2(3 - 2 \times 2)))$
 - 3. $(2 \times 3 - 5 + (1 + 2(3 - 2 \times 2)))$
 - 4. $(2 \times 3 - 5 - (1 - 2(3 - 2 \times 2)))$

Question ID : 264330153796
 Option 1 ID : 264330602650
 Option 2 ID : 264330602648
 Option 3 ID : 264330602649
 Option 4 ID : 264330602647
 Status : Answered
 Chosen Option : 3

Q.18 Two numbers are in the ratio of 6 : 7. If the difference between these numbers is 16, then find the numbers.

- Ans
- 1. 96, 112
 - 2. 80, 96
 - 3. 120, 136
 - 4. 104, 120

Question ID : 264330153876
 Option 1 ID : 264330602967
 Option 2 ID : 264330602969
 Option 3 ID : 264330602968
 Option 4 ID : 264330602970
 Status : Answered
 Chosen Option : 1

Q.19 A, B and C can complete a work in 10, 15 and 20 days, respectively. They work on alternate days such that 1st day A, 2nd day B and 3rd day C. Again 4th day A, 5th day B and so on. If they work in the same way, in how many days will the work be completed?

- Ans
- 1. $13 \frac{1}{4}$
 - 2. 15
 - 3. 14
 - 4. $13 \frac{1}{2}$

Question ID : 264330154060
 Option 1 ID : 264330603704
 Option 2 ID : 264330603705
 Option 3 ID : 264330603703
 Option 4 ID : 264330603706
 Status : Answered
 Chosen Option : 4

Q.20 A grocer purchased 50 kg of sugar at ₹40 per kg and mixed with 70 kg of sugar at ₹30 per kg. At what rate should he sell the mixture (per kg) to gain 20%?

- Ans**
- 1. ₹60
 - 2. ₹20
 - 3. ₹35
 - 4. ₹41

Question ID : 264330155997
Option 1 ID : 264330611387
Option 2 ID : 264330611389
Option 3 ID : 264330611388
Option 4 ID : 264330611390
Status : Answered
Chosen Option : 4

Section : Reasoning Ability and Problem Solving

Q.1 2 is related to 40 following a certain logic. Following the same logic, 5 is related to 250. To which of the following is 7 related to, following the same logic?

- Ans**
- 1. 470
 - 2. 490
 - 3. 450
 - 4. 400

Question ID : 264330151579
Option 1 ID : 264330593945
Option 2 ID : 264330593946
Option 3 ID : 264330593944
Option 4 ID : 264330593943
Status : Answered
Chosen Option : 2

Q.2 Select the combination of letters that when sequentially placed in the blanks of the given series, will complete the series.

R__RT_R_R_TR

- Ans**
- 1. RTRRT
 - 2. TTTRR
 - 3. TRRTR
 - 4. RTTTR

Question ID : 264330151641
Option 1 ID : 264330594194
Option 2 ID : 264330594191
Option 3 ID : 264330594193
Option 4 ID : 264330594192
Status : Answered
Chosen Option : 3

Q.3 J, K, P, Q, R and M are sitting around a circular table facing the centre.
 J is sitting to the immediate left of M. R is sitting 2nd to the left of J. K is sitting 3rd to the right of J. P sits to the immediate right of R.
 Who sits 2nd to the left of K?

- Ans**
- 1. R
 - 2. Q
 - 3. M
 - 4. P

Question ID : 264330155651
 Option 1 ID : 264330610007
 Option 2 ID : 264330610010
 Option 3 ID : 264330610009
 Option 4 ID : 264330610008
 Status : Answered
 Chosen Option : 3

Q.4 What should come in place of '?' in the given series?

3 20 54 ? 258 530 1074

- Ans**
- 1. 122
 - 2. 128
 - 3. 118
 - 4. 124

Question ID : 264330151499
 Option 1 ID : 264330593624
 Option 2 ID : 264330593626
 Option 3 ID : 264330593623
 Option 4 ID : 264330593625
 Status : Answered
 Chosen Option : 1

Q.5 Read the given statements and conclusions carefully. You have to take the given statements to be true even if they seem to be at variance from commonly known facts. You have to decide which conclusion/s logically follow/s from the given statements.

Statements: All crows are sparrows. Some sparrows are parrots. All parrots are yellow.

Conclusion I: Some crows are parrots.

Conclusion II: Some yellow are parrots.

- Ans**
- 1. Only conclusion (II) is follow.
 - 2. Both conclusions (I) and (II) are follow.
 - 3. Only conclusion (I) is follow.
 - 4. Neither conclusion (I) nor (II) is follow.

Question ID : 264330155929
 Option 1 ID : 264330611120
 Option 2 ID : 264330611122
 Option 3 ID : 264330611119
 Option 4 ID : 264330611121
 Status : Answered
 Chosen Option : 1

Q.6 The position of how many letters will remain unchanged if each of the letter in the word 'CATEGORY' is arranged in alphabetical order?

- Ans**
- 1. Three
 - 2. Two
 - 3. None
 - 4. One

Question ID : 264330154327
Option 1 ID : 264330604774
Option 2 ID : 264330604771
Option 3 ID : 264330604773
Option 4 ID : 264330604772
Status : Answered
Chosen Option : 4

Q.7 What should come in place of ? in the given series?

978 967 956 945 934 ?

- Ans**
- 1. 922
 - 2. 923
 - 3. 921
 - 4. 924

Question ID : 264330151553
Option 1 ID : 264330593840
Option 2 ID : 264330593841
Option 3 ID : 264330593839
Option 4 ID : 264330593842
Status : Answered
Chosen Option : 2

Q.8 What should come in place of ? in the given series based on the English alphabetical order?

ETM, AWO, WZQ, SCS, ?

- Ans**
- 1. MEU
 - 2. NFV
 - 3. OFU
 - 4. MEV

Question ID : 264330155807
Option 1 ID : 264330610632
Option 2 ID : 264330610631
Option 3 ID : 264330610634
Option 4 ID : 264330610633
Status : Answered
Chosen Option : 3

Q.9 In a certain code language, 'YJM' is coded as '26-11-14' and 'SOP' is coded as '20-16-17'. What is the code for 'BTX' in the given code language?

- Ans**
- ✓ 1. 3-21-25
 - ✗ 2. 5-22-24
 - ✗ 3. 5-23-25
 - ✗ 4. 4-22-24

Question ID : 264330155822
 Option 1 ID : 264330610691
 Option 2 ID : 264330610694
 Option 3 ID : 264330610693
 Option 4 ID : 264330610692
 Status : Answered
 Chosen Option : 1

Q.10 If G means '-'; D means '×'; A means '+'; B means '÷', then what will come in place of the question mark (?) in the following equation?

$$19 \text{ D } 6 \text{ B } 34 \text{ A } 2 \text{ G } 27 = ?$$

- Ans**
- ✗ 1. 126
 - ✓ 2. 104
 - ✗ 3. 65
 - ✗ 4. 83

Question ID : 264330154688
 Option 1 ID : 264330606218
 Option 2 ID : 264330606217
 Option 3 ID : 264330606216
 Option 4 ID : 264330606215
 Status : Answered
 Chosen Option : 2

Q.11 In a certain code language, 'LIAR' is coded as '5148' and 'REAL' is coded as '1582'. What is the code for 'E' in the given code language?

- Ans**
- ✗ 1. 5
 - ✗ 2. 8
 - ✓ 3. 2
 - ✗ 4. 1

Question ID : 264330151702
 Option 1 ID : 264330594437
 Option 2 ID : 264330594436
 Option 3 ID : 264330594438
 Option 4 ID : 264330594435
 Status : Answered
 Chosen Option : 3

Q.12 Select the combination of letters that when sequentially placed in the blanks of the given series will make it logically complete.

KC_OK_PO_YSOKWV_ K_YO

- Ans**
- 1. MDHTV
 - 2. LJMST
 - 3. KJNVL
 - 4. MAKOU

Question ID : 264330156319

Option 1 ID : 264330612676

Option 2 ID : 264330612677

Option 3 ID : 264330612675

Option 4 ID : 264330612678

Status : Answered

Chosen Option : 2

Q.13 In the following number-pairs, the second number is obtained by applying certain mathematical operations to the first number. Select the set in which the numbers are related in the same way as are the numbers of the following sets.

(NOTE: Operations should be performed on the whole numbers, without breaking down the numbers into its constituent digits. E.g. 13 – Operations on 13 such as adding / subtracting / multiplying etc. to 13 can be performed.

Breaking down 13 into 1 and 3 and then performing mathematical operations on 1 and 3 is not allowed)

65, 74

87, 96

- Ans**
- 1. 75, 123
 - 2. 63, 157
 - 3. 81, 156
 - 4. 92, 101

Question ID : 264330151622

Option 1 ID : 264330594117

Option 2 ID : 264330594118

Option 3 ID : 264330594116

Option 4 ID : 264330594115

Status : Answered

Chosen Option : 4

Q.14 What should come in place of '?' in the given series?

13 52 169 520 1573 ?

- Ans**
- 1. 4781
 - 2. 4732
 - 3. 4895
 - 4. 4863

Question ID : 264330151477

Option 1 ID : 264330593536

Option 2 ID : 264330593535

Option 3 ID : 264330593538

Option 4 ID : 264330593537

Status : Answered

Chosen Option : 2

Q.15 Which figure should replace the question mark (?) if the following figure series were to be continued?

P	E	8	↑	8	3	3	8	↑	E	↑	∩	
	∩			P			□		3			?
↑	A	3	∩	E	A	E	A	∩	□	8	A	

Ans

✗ 1.

∩	↑	E
	□	
8	A	3

✓ 2.

∩	↑	E
	L	
8	A	□

✗ 3.

∩	E	↑
	□	
8	A	3

✗ 4.

∩	E	↑
	L	
8	A	□

Question ID : 264330154734

Option 1 ID : 264330606400

Option 2 ID : 264330606402

Option 3 ID : 264330606401

Option 4 ID : 264330606399

Status : Answered

Chosen Option : 2

Q.16 उस शब्द-युग्म का चयन कीजिए जो नीचे दिए गए शब्दों के युग्म में व्यक्त किए गए समान संबंध का सबसे अच्छा निरूपण करता है।

(शब्दों को अर्थपूर्ण हिंदी शब्दों के रूप में माना जाना चाहिए और उन्हें शब्द में अक्षरों की संख्या/व्यंजन/स्वरों की संख्या के आधार पर एक दूसरे से संबंधित नहीं किया जाना चाहिए।)

सराहना : प्रशंसा करना

Ans

- ✓ 1. दावत देना : खातिर करना
- ✗ 2. रिझाना : ठुकरा देना
- ✗ 3. सुंदर बनाना : तरोताज़ा करना
- ✗ 4. सिखाना : सीखना

Question ID : 264330154640

Option 1 ID : 264330606023

Option 2 ID : 264330606026

Option 3 ID : 264330606025

Option 4 ID : 264330606024

Status : Answered

Chosen Option : 1

Q.17 Read the given statement(s) and conclusions carefully. Assuming that the information given in the statements is true, even if it appears to be at variance with commonly known facts, decide which of the given conclusions logically follow(s) from the statement(s).

Statements: All the actors are girls. All the girls are beautiful.

Conclusions:

- (I) All the actors are beautiful.
- (II) Some girls are actors.

Ans

- ✓ 1. Both conclusions (I) and (II) are follows.
- ✗ 2. Only conclusion (II) is follows.
- ✗ 3. Only conclusion (I) is follows.
- ✗ 4. Neither conclusion (I) nor (II) is follows.

Question ID : 264330154431

Option 1 ID : 264330605190

Option 2 ID : 264330605188

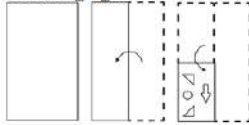
Option 3 ID : 264330605187

Option 4 ID : 264330605189

Status : Answered

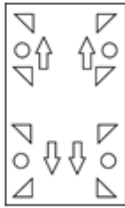
Chosen Option : 1

Q.18 The sequence of folding a piece of paper and the manner in which the folded paper is cut is shown in the following figures. How would this paper look when unfolded?

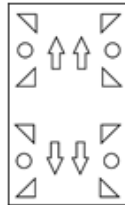


Ans

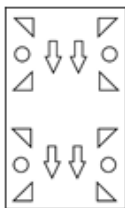
1.



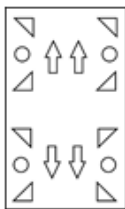
2.



3.



4.



Question ID : 264330155613

Option 1 ID : 264330609857

Option 2 ID : 264330609858

Option 3 ID : 264330609855

Option 4 ID : 264330609856

Status : Answered

Chosen Option : 2

Q.19 What will come in place of '?' in the following equation, if '+' and '×' are interchanged and '-÷' and '÷+' are interchanged?

$$18 - 9 \div 4 \times 3 + 5 = ?$$

Ans 1. 17

2. 13

3. 18

4. 19

Question ID : 264330154670

Option 1 ID : 264330606145

Option 2 ID : 264330606143

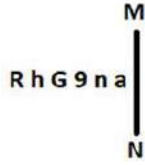
Option 3 ID : 264330606144

Option 4 ID : 264330606146

Status : Answered

Chosen Option : 2

Q.20 Select the correct mirror image of the given figure when the mirror is placed at MN as shown below.



- Ans
- 1. a u e e h r
 - 2. s u e G h r
 - 3. a u e e h R
 - 4. s u e e h R

Question ID : 264330151512
 Option 1 ID : 264330593676
 Option 2 ID : 264330593675
 Option 3 ID : 264330593677
 Option 4 ID : 264330593678
 Status : Answered
 Chosen Option : 3

Section : General Awareness

Q.1 The Gua and Noamundi mines are located in with state of India?

- Ans
- 1. Assam
 - 2. Haryana
 - 3. Rajasthan
 - 4. Jharkhand

Question ID : 264330161527
 Option 1 ID : 264330633435
 Option 2 ID : 264330633438
 Option 3 ID : 264330633437
 Option 4 ID : 264330633436
 Status : Answered
 Chosen Option : 4

Q.2 What is a fiscal year?

- Ans
- 1. A year that represents the financial reporting period for the government
 - 2. A year with a surplus in government revenue
 - 3. A year with a deficit in government revenue
 - 4. A year in which tax rates are increased

Question ID : 264330157272
 Option 1 ID : 264330616454
 Option 2 ID : 264330616451
 Option 3 ID : 264330616452
 Option 4 ID : 264330616453
 Status : Answered
 Chosen Option : 1

Q.3 The Constitution (Scheduled Castes and Scheduled Tribes) Order (Second Amendment) Bill, 2022, was passed in December 2022 and is related to which state?

- Ans
- 1. Bihar
 - 2. Uttarakhand
 - 3. Uttar Pradesh
 - 4. Karnataka

Question ID : 264330158334
Option 1 ID : 264330620698
Option 2 ID : 264330620696
Option 3 ID : 264330620695
Option 4 ID : 264330620697
Status : Not Answered
Chosen Option : --

Q.4 Identify the Kuchipudi dancer from following, who was awarded with 'Padma Shri' in the year 2022.

- Ans
- 1. Vidyand Sarek
 - 2. Padmaja Reddy
 - 3. Dr. Veeraswamy Seshiah
 - 4. KV Rabiya

Question ID : 264330155528
Option 1 ID : 264330609516
Option 2 ID : 264330609517
Option 3 ID : 264330609515
Option 4 ID : 264330609518
Status : Answered
Chosen Option : 2

Q.5 Buddha Purnima is marked on a full moon day in the Hindu month of _____.

- Ans
- 1. Vaisakh
 - 2. Jyestha
 - 3. Bhadra
 - 4. Ashadha

Question ID : 264330160830
Option 1 ID : 264330630651
Option 2 ID : 264330630652
Option 3 ID : 264330630654
Option 4 ID : 264330630653
Status : Not Answered
Chosen Option : --

Q.6 Which of the following is the official language of Afghanistan?

- Ans
- 1. Sinhala
 - 2. Burmese
 - 3. Dari
 - 4. Dzongkha

Question ID : 264330160175
Option 1 ID : 264330628040
Option 2 ID : 264330628042
Option 3 ID : 264330628039
Option 4 ID : 264330628041
Status : Answered
Chosen Option : 3

Q.7 Who started the temple entry movement in 1927?

- Ans 1. Mahadev Govind Ranade
 2. Bhimrao Ambedkar
 3. Mahatma Gandhi
 4. Annie Besant

Question ID : 264330162350
Option 1 ID : 264330636729
Option 2 ID : 264330636728
Option 3 ID : 264330636727
Option 4 ID : 264330636730
Status : Answered
Chosen Option : 2

Q.8 In which state is Gobind Sagar (Bhakra Nangal Project) located?

- Ans 1. Himachal Pradesh
 2. Gujarat
 3. Rajasthan
 4. Punjab

Question ID : 264330160140
Option 1 ID : 264330627900
Option 2 ID : 264330627902
Option 3 ID : 264330627901
Option 4 ID : 264330627899
Status : Answered
Chosen Option : 1

Q.9 Pandit Ravi Shankar is known worldwide for playing which of the following musical instruments?

- Ans 1. Mohan Veena
 2. Sarod
 3. Been
 4. Sitar

Question ID : 264330161771
Option 1 ID : 264330634414
Option 2 ID : 264330634413
Option 3 ID : 264330634411
Option 4 ID : 264330634412
Status : Answered
Chosen Option : 4

Q.10 The Arabian Sea is an extension of which of the following oceans?

- Ans 1. Pacific Ocean
 2. Southern Ocean
 3. Arctic Ocean
 4. Indian ocean

Question ID : 264330157836
Option 1 ID : 264330618703
Option 2 ID : 264330618706
Option 3 ID : 264330618705
Option 4 ID : 264330618704
Status : Answered
Chosen Option : 4

Q.11 Which of the following is a dimension of microfinance institutions (MFIs) in India?

- Ans 1. Outreach to rural areas
 2. Loan interest rates
 3. Investment in the stock market
 4. Availability of credit cards

Question ID : 264330157292
Option 1 ID : 264330616534
Option 2 ID : 264330616531
Option 3 ID : 264330616533
Option 4 ID : 264330616532
Status : Answered
Chosen Option : 2

Q.12 Shambhu Maharaj was a renowned guru of which of the following Gharanas of Kathak?

- Ans 1. Lucknow
 2. dipur
 3. Raigarh
 4. Banaras

Question ID : 264330160810
Option 1 ID : 264330630572
Option 2 ID : 264330630571
Option 3 ID : 264330630574
Option 4 ID : 264330630573
Status : Answered
Chosen Option : 1

Q.13 Which is the oldest Stupa of the Buddhist Period?

- Ans 1. Dhamek Stupa
 2. Mahabodhi Stupa
 3. Kesariya Stupa
 4. Sanchi Stupa

Question ID : 264330160761
Option 1 ID : 264330630378
Option 2 ID : 264330630375
Option 3 ID : 264330630376
Option 4 ID : 264330630377
Status : Not Answered
Chosen Option : --

Q.14 Who conducts elections for both the houses of Parliament in India?

- Ans 1. Ministry of Parliamentary Affairs
 2. Election Commission
 3. President
 4. Prime Minister

Question ID : 264330160860
Option 1 ID : 264330630773
Option 2 ID : 264330630771
Option 3 ID : 264330630774
Option 4 ID : 264330630772
Status : Answered
Chosen Option : 2

Q.15 The third battle of Panipat was fought in which of the following years?

- Ans 1. 1761
 2. 1707
 3. 1786
 4. 1751

Question ID : 264330161734
Option 1 ID : 264330634264
Option 2 ID : 264330634263
Option 3 ID : 264330634266
Option 4 ID : 264330634265
Status : Answered
Chosen Option : 1

Q.16 'Untouchable' is a novel written by:

- Ans 1. Mulk Raj Anand
 2. RC Majumdar
 3. Premchand
 4. Bankim Chandra Chattopadhyay

Question ID : 264330155498
Option 1 ID : 264330609395
Option 2 ID : 264330609396
Option 3 ID : 264330609398
Option 4 ID : 264330609397
Status : Answered
Chosen Option : 2

Q.17 Which dance form is associated with Natwari Dance?

- Ans 1. Kathak
 2. Kuchipudi
 3. Odissi
 4. Kathakali

Question ID : 264330159053
Option 1 ID : 264330623572
Option 2 ID : 264330623574
Option 3 ID : 264330623571
Option 4 ID : 264330623573
Status : Not Answered
Chosen Option : --

Q.18 Birsa Munda hockey stadium is one of the India's largest hockey stadium. In which state is this stadium situated?

- Ans 1. Madhya Pradesh
 2. Bihar
 3. Odisha
 4. Chhattisgarh

Question ID : 264330158355
Option 1 ID : 264330620781
Option 2 ID : 264330620779
Option 3 ID : 264330620782
Option 4 ID : 264330620780
Status : Answered
Chosen Option : 3

Q.19 The directive principles are largely classified into three broad categories. Which of the following is NOT the part of this classification?

- Ans
- 1. Liberal
 - 2. Socialistic
 - 3. Gandhian
 - 4. Authoritative

Question ID : 264330160859
Option 1 ID : 264330630769
Option 2 ID : 264330630767
Option 3 ID : 264330630768
Option 4 ID : 264330630770
Status : Answered
Chosen Option : 4

Q.20 Which of the following countries did India defeat to clinch its maiden Women's Junior Hockey Asia Cup title?

- Ans
- 1. Japan
 - 2. Chinese Taipei
 - 3. Malaysia
 - 4. South Korea

Question ID : 264330161129
Option 1 ID : 264330631848
Option 2 ID : 264330631850
Option 3 ID : 264330631849
Option 4 ID : 264330631847
Status : Answered
Chosen Option : 2

Q.21 Who among the following is the author of the book 'Sita: An Illustrated Retelling of the Ramayana'?

- Ans
- 1. Ravinder Singh
 - 2. Devdutt Pattanaik
 - 3. Amish Tripathi
 - 4. Durjoy Datta

Question ID : 264330155457
Option 1 ID : 264330609234
Option 2 ID : 264330609233
Option 3 ID : 264330609231
Option 4 ID : 264330609232
Status : Not Answered
Chosen Option : --

Q.22 Which soft metal in group 1 of the periodic table tarnishes within a few seconds of exposure to air?

- Ans 1. Barium
 2. Sodium
 3. Strontium
 4. Francium

Question ID : 264330161054
Option 1 ID : 264330631548
Option 2 ID : 264330631549
Option 3 ID : 264330631547
Option 4 ID : 264330631550
Status : Answered
Chosen Option : 1

Q.23 The 'Ka Shad Mastieh' or victory dance of the _____ tribe of Meghalaya is an ancient war dance performed during the prominent festival of the tribe.

- Ans 1. Bhoi
 2. War
 3. Khasi
 4. dintia

Question ID : 264330161345
Option 1 ID : 264330632709
Option 2 ID : 264330632710
Option 3 ID : 264330632708
Option 4 ID : 264330632707
Status : Answered
Chosen Option : 3

Q.24 What is the weight of the ball in handball for men?

- Ans 1. 425 to 475 gm
 2. 325 to 375 gm
 3. 525 to 575 gm
 4. 225 to 275 gm

Question ID : 264330158248
Option 1 ID : 264330620353
Option 2 ID : 264330620351
Option 3 ID : 264330620354
Option 4 ID : 264330620352
Status : Not Answered
Chosen Option : --

Q.25 Which vitamin is needed for a healthy immune system, low-light vision, and healthy skin?

- Ans
- 1. Vitamin K
 - 2. Vitamin B2
 - 3. Vitamin B9
 - 4. Vitamin A

Question ID : 264330160991
Option 1 ID : 264330631296
Option 2 ID : 264330631298
Option 3 ID : 264330631297
Option 4 ID : 264330631295
Status : Answered
Chosen Option : 4

Section : English Language and Comprehension

Q.1 Select the option that can be used as a one-word substitute for the given group of words.
Study of sound and sound waves

- Ans
- 1. Botany
 - 2. Physics
 - 3. Demography
 - 4. Acoustics

Question ID : 264330152772
Option 1 ID : 264330598679
Option 2 ID : 264330598681
Option 3 ID : 264330598680
Option 4 ID : 264330598682
Status : Answered
Chosen Option : 4

Q.2 Select the most appropriate option to fill in the blank.
The students of class 7 gave their teacher a gift, which was _____ to her.

- Ans
- 1. revealing
 - 2. shocking
 - 3. confusing
 - 4. surprising

Question ID : 264330152580
Option 1 ID : 264330597923
Option 2 ID : 264330597925
Option 3 ID : 264330597926
Option 4 ID : 264330597924
Status : Answered
Chosen Option : 4

Q.3 Select the most appropriate synonym of the given word.
Obsession

- Ans** 1. Discrimination
 2. Fascination
 3. Unconcern
 4. Sympathy

Question ID : 264330153559
Option 1 ID : 264330601736
Option 2 ID : 264330601737
Option 3 ID : 264330601735
Option 4 ID : 264330601738
Status : Answered
Chosen Option : 2

Q.4 The following sentence has been split into four segments. Identify the segment that contains a grammatical error and select the option which rectifies that error.

A lot of adulterants / are chemicals that can lead / to an range of health problems / in both children and adults.

- Ans** 1. to a range of health problems
 2. are chemical that can lead
 3. A lot of adulterant
 4. in both children and adult.

Question ID : 264330141340
Option 1 ID : 264330553696
Option 2 ID : 264330553695
Option 3 ID : 264330553697
Option 4 ID : 264330553698
Status : Answered
Chosen Option : 1

Q.5 Select the most appropriate option that can substitute the underlined segment in the given sentence.

They would find someone drive the wagon back across the desert.

- Ans** 1. in drive in the
 2. to drive
 3. to drive the
 4. in driving

Question ID : 264330153482
Option 1 ID : 264330601446
Option 2 ID : 264330601445
Option 3 ID : 264330601443
Option 4 ID : 264330601444
Status : Answered
Chosen Option : 3

Q.6 The following sentence has been split into four segments. Identify the segment that contains a grammatical error.

The ball / I kicked / went highly / in the sky.

- Ans
- 1. The ball
 - 2. went highly
 - 3. in the sky
 - 4. I kicked

Question ID : 264330153184
Option 1 ID : 264330600295
Option 2 ID : 264330600297
Option 3 ID : 264330600298
Option 4 ID : 264330600296
Status : Answered
Chosen Option : 2

Q.7 Select the most appropriate idiom to fill in the blank.

Rajat is known for his notorious nature. He will be friendly to your face but likes

_____.

- Ans
- 1. to blow his trumpet
 - 2. to stab you in the back
 - 3. to paint the whole town red
 - 4. to get all bent out of the shape

Question ID : 264330153562
Option 1 ID : 264330601750
Option 2 ID : 264330601748
Option 3 ID : 264330601749
Option 4 ID : 264330601747
Status : Answered
Chosen Option : 2

Q.8 Select the most appropriate meaning of the given idiom.

Barking up the wrong tree

- Ans
- 1. Provoke trouble
 - 2. To make a bad situation worse
 - 3. Getting a good start is important
 - 4. To be mistaken, to be looking for solutions in the wrong place

Question ID : 264330153280
Option 1 ID : 264330600677
Option 2 ID : 264330600676
Option 3 ID : 264330600678
Option 4 ID : 264330600675
Status : Answered
Chosen Option : 4

Q.9 Select the option that can be used as a one-word substitute for the given group of words.

A creature which depends on others

- Ans
- 1. Microbes
 - 2. Virus
 - 3. Parasite
 - 4. Bacteria

Question ID : 264330152586

Option 1 ID : 264330597949

Option 2 ID : 264330597947

Option 3 ID : 264330597950

Option 4 ID : 264330597948

Status : Answered

Chosen Option : 3

Q.10 Select the most appropriate idiom to fill in the blank.

The play I saw last night was a _____.

- Ans
- 1. hit the road
 - 2. hit the hay
 - 3. smash hit
 - 4. hit the roof

Question ID : 264330153099

Option 1 ID : 264330599962

Option 2 ID : 264330599959

Option 3 ID : 264330599960

Option 4 ID : 264330599961

Status : Answered

Chosen Option : 3

Q.11 Select the most appropriate option to fill in the blank.

He is _____ of many chain snatching cases in Dariyaganj.

- Ans
- 1. ackused
 - 2. acxused
 - 3. akused
 - 4. accused

Question ID : 264330153306

Option 1 ID : 264330600781

Option 2 ID : 264330600780

Option 3 ID : 264330600779

Option 4 ID : 264330600782

Status : Answered

Chosen Option : 4

Q.12 The following sentence has been split into four segments. Identify the segment that contains a grammatical error.
Despite the setbacks and obstacles we faced, / our team rallied together and achieved our goals, / which teach us the importance of / teamwork, resilience, and determination.

- Ans**
- 1. Despite the setbacks and obstacles we faced,
 - 2. teamwork, resilience, and determination
 - 3. which teach us the importance of
 - 4. our team rallied together and achieved our goals,

Question ID : 264330144181
Option 1 ID : 264330564987
Option 2 ID : 264330564990
Option 3 ID : 264330564989
Option 4 ID : 264330564988
Status : Answered
Chosen Option : 3

Q.13 Select the option that correctly rectifies the spelling error that is underlined.
The questionnaire used by the researcher was of top quality.

- Ans**
- 1. questionnaire
 - 2. questionnaire
 - 3. questionnaire
 - 4. questionnairee

Question ID : 264330153422
Option 1 ID : 264330601219
Option 2 ID : 264330601220
Option 3 ID : 264330601221
Option 4 ID : 264330601222
Status : Answered
Chosen Option : 2

Q.14 The given sentence contains an error. Select the option that correctly rectifies the error.
That career competition was the difficultest exam he had ever given.

- Ans**
- 1. That career competition was the difficultest exam than any he had ever given.
 - 2. That career competition was the most difficult exam than any he had ever given.
 - 3. That career competition was the most difficultest exam he had ever given.
 - 4. That career competition was the most difficult exam he had ever given.

Question ID : 264330152607
Option 1 ID : 264330598034
Option 2 ID : 264330598032
Option 3 ID : 264330598031
Option 4 ID : 264330598033
Status : Answered
Chosen Option : 4

Q.15 Select the most appropriate idiom for the following sentence.
Shweta organises the sale of handmade pottery at a cheap rate.

- Ans 1. Hush money
 2. Go for a song
 3. Having one's cake and eating it too
 4. Making a fuss out of something

Question ID : 264330141303
Option 1 ID : 264330553547
Option 2 ID : 264330553548
Option 3 ID : 264330553549
Option 4 ID : 264330553550
Status : Answered
Chosen Option : 2

Q.16 Select the most appropriate ANTONYM of the given word.
Guilty

- Ans 1. Responsible
 2. Innocent
 3. Criminal
 4. Patient

Question ID : 264330153364
Option 1 ID : 264330601009
Option 2 ID : 264330601008
Option 3 ID : 264330601010
Option 4 ID : 264330601007
Status : Answered
Chosen Option : 2

Q.17 Identify the INCORRECTLY spelt word in the following sentence and select its correct spelling from the given options.
The colours of the rainbow seemed to shine through the triangular prism as the sun hit the object.

- Ans 1. rainbouw
 2. son
 3. triangular
 4. object

Question ID : 264330153110
Option 1 ID : 264330600003
Option 2 ID : 264330600005
Option 3 ID : 264330600004
Option 4 ID : 264330600006
Status : Answered
Chosen Option : 3

Q.18 Select the most appropriate option that can substitute the underlined segment in the given sentence.

The intrepid group of adventurers climbed the mountain despite of bad weather and road closures.

- Ans 1. despite
 2. in spite
 3. in view of
 4. due to

Question ID : 264330151854
Option 1 ID : 264330595035
Option 2 ID : 264330595036
Option 3 ID : 264330595037
Option 4 ID : 264330595038
Status : Answered
Chosen Option : 1

Q.19 Select the most appropriate option that can substitute the underlined segment in the given sentence.

The airplane flowed over the mountains, offering the passengers a breath-taking view of the majestic peaks below.

- Ans 1. flew beyond
 2. flew over
 3. flowed above
 4. flowed beyond

Question ID : 264330151858
Option 1 ID : 264330595054
Option 2 ID : 264330595053
Option 3 ID : 264330595052
Option 4 ID : 264330595051
Status : Answered
Chosen Option : 2

Q.20 Select the most appropriate ANTONYM of the given word.
Ecstasy

- Ans 1. Euphoria
 2. Coarse
 3. Natural
 4. Despair

Question ID : 264330152676
Option 1 ID : 264330598307
Option 2 ID : 264330598309
Option 3 ID : 264330598308
Option 4 ID : 264330598310
Status : Answered
Chosen Option : 4

Comprehension:

In the following passage, some words have been deleted. Read the passage carefully and select the most appropriate option to fill in each blank.

As a boy, I was always exploring lonely places—neglected gardens and orchards, unoccupied houses, patches of scrub or wasteland, the fields outside the town, the fringes of the forest. On one of my rambles (1)_____the bungalow, I pushed my way through a thicket of lantana bushes and stumbled over a thick stone slab, twisting my ankle slightly as I fell. For some time, I sat on the grass massaging my foot. When the pain eased, I looked more (2)_____ at the stone slab and was surprised to find that it was a gravestone. It was almost entirely covered by ivy; obviously no one had been near it for years. I tugged at the ivy and some of it came away in my hands. There was some (3)_____ lettering on the grave, half-obscured by grass and moss. I could make out a name—Rose—but little more. I sat there for some time, (4)_____ over my discovery. I was wondering why 'Rose' should have been buried at so lonely a spot when there was a (5)_____ not far away.

SubQuestion No : 21

Q.21 Select the most appropriate option to fill in blank number 1.

- Ans 1. before
 2. behind
 3. by dint of
 4. below

Question ID : 264330153544

Option 1 ID : 264330601676

Option 2 ID : 264330601678

Option 3 ID : 264330601677

Option 4 ID : 264330601675

Status : Answered

Chosen Option : 2

Comprehension:

In the following passage, some words have been deleted. Read the passage carefully and select the most appropriate option to fill in each blank.

As a boy, I was always exploring lonely places—neglected gardens and orchards, unoccupied houses, patches of scrub or wasteland, the fields outside the town, the fringes of the forest. On one of my rambles (1)_____the bungalow, I pushed my way through a thicket of lantana bushes and stumbled over a thick stone slab, twisting my ankle slightly as I fell. For some time, I sat on the grass massaging my foot. When the pain eased, I looked more (2)_____ at the stone slab and was surprised to find that it was a gravestone. It was almost entirely covered by ivy; obviously no one had been near it for years. I tugged at the ivy and some of it came away in my hands. There was some (3)_____ lettering on the grave, half-obscured by grass and moss. I could make out a name—Rose—but little more. I sat there for some time, (4)_____ over my discovery. I was wondering why 'Rose' should have been buried at so lonely a spot when there was a (5)_____ not far away.

SubQuestion No : 22

Q.22 Select the most appropriate option to fill in blank number 2.

- Ans 1. closely
 2. emptyly
 3. frankly
 4. lawfully

Question ID : 264330153545

Option 1 ID : 264330601681

Option 2 ID : 264330601679

Option 3 ID : 264330601680

Option 4 ID : 264330601682

Status : Answered

Chosen Option : 1

Comprehension:

In the following passage, some words have been deleted. Read the passage carefully and select the most appropriate option to fill in each blank.

As a boy, I was always exploring lonely places—neglected gardens and orchards, unoccupied houses, patches of scrub or wasteland, the fields outside the town, the fringes of the forest.

On one of my rambles (1)_____the bungalow, I pushed my way through a thicket of lantana bushes and stumbled over a thick stone slab, twisting my ankle slightly as I fell. For some time, I sat on the grass massaging my foot. When the pain eased, I looked more (2)_____ at the stone slab and was surprised to find that it was a gravestone. It was almost entirely covered by ivy; obviously no one had been near it for years. I tugged at the ivy and some of it came away in my hands. There was some (3)_____ lettering on the grave, half-obscured by grass and moss. I could make out a name—Rose—but little more. I sat there for some time, (4)_____ over my discovery. I was wondering why 'Rose' should have been buried at so lonely a spot when there was a (5)_____ not far away.

SubQuestion No : 23

Q.23 Select the most appropriate option to fill in blank number 3.

- Ans 1. idiotic
 2. sturdy
 3. blurred
 4. nomadic

Question ID : 264330153546

Option 1 ID : 264330601686

Option 2 ID : 264330601683

Option 3 ID : 264330601684

Option 4 ID : 264330601685

Status : Answered

Chosen Option : 3

Comprehension:

In the following passage, some words have been deleted. Read the passage carefully and select the most appropriate option to fill in each blank.

As a boy, I was always exploring lonely places—neglected gardens and orchards, unoccupied houses, patches of scrub or wasteland, the fields outside the town, the fringes of the forest.

On one of my rambles (1)_____the bungalow, I pushed my way through a thicket of lantana bushes and stumbled over a thick stone slab, twisting my ankle slightly as I fell. For some time, I sat on the grass massaging my foot. When the pain eased, I looked more (2)_____ at the stone slab and was surprised to find that it was a gravestone. It was almost entirely covered by ivy; obviously no one had been near it for years. I tugged at the ivy and some of it came away in my hands. There was some (3)_____ lettering on the grave, half-obscured by grass and moss. I could make out a name—Rose—but little more. I sat there for some time, (4)_____ over my discovery. I was wondering why 'Rose' should have been buried at so lonely a spot when there was a (5)_____ not far away.

SubQuestion No : 24

Q.24 Select the most appropriate option to fill in blank number 4.

- Ans 1. sleeping
 2. pondering
 3. being
 4. pulling

Question ID : 264330153547

Option 1 ID : 264330601690

Option 2 ID : 264330601687

Option 3 ID : 264330601688

Option 4 ID : 264330601689

Status : Answered

Chosen Option : 2

Comprehension:

In the following passage, some words have been deleted. Read the passage carefully and select the most appropriate option to fill in each blank.

As a boy, I was always exploring lonely places—neglected gardens and orchards, unoccupied houses, patches of scrub or wasteland, the fields outside the town, the fringes of the forest. On one of my rambles (1)_____the bungalow, I pushed my way through a thicket of lantana bushes and stumbled over a thick stone slab, twisting my ankle slightly as I fell. For some time, I sat on the grass massaging my foot. When the pain eased, I looked more (2)_____ at the stone slab and was surprised to find that it was a gravestone. It was almost entirely covered by ivy; obviously no one had been near it for years. I tugged at the ivy and some of it came away in my hands. There was some (3)_____ lettering on the grave, half-obscured by grass and moss. I could make out a name—Rose—but little more. I sat there for some time, (4)_____ over my discovery. I was wondering why 'Rose' should have been buried at so lonely a spot when there was a (5)_____ not far away.

SubQuestion No : 25

Q.25 Select the most appropriate option to fill in blank number 5.

- Ans
- 1. dormitory
 - 2. kennel
 - 3. sanctuary
 - 4. cemetery

Question ID : 264330153548

Option 1 ID : 264330601694

Option 2 ID : 264330601691

Option 3 ID : 264330601692

Option 4 ID : 264330601693

Status : Answered

Chosen Option : 4

SSC MTS 2023 Tier 1 Sept 4 Shift 3 Question Paper with Answers

Roll Number	
Candidate Name	
Exam Date	04/09/2023
Exam Time	4:00 PM - 6:00 PM
Subject	MTS Non Tech Havaladar CBIC and CBN Examination 2023

Section : Numerical and Mathematical Ability

Q.1 Simplify the given expression.

$$71 - (-3)\{-2 - (\overline{8 - 3})\} + 3\{5 + (-2)(-1)\}$$

- Ans
- 1. 30
 - 2. 119
 - 3. 50
 - 4. 71

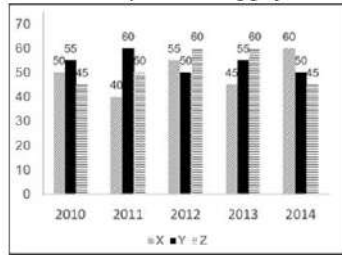
Question ID : 264330157321
Option 1 ID : 264330616650
Option 2 ID : 264330616648
Option 3 ID : 264330616647
Option 4 ID : 264330616649
Status : Answered
Chosen Option : 4

Q.2 Find the mean proportional between 0.08 and 0.32.

- Ans
- 1. 16
 - 2. 0.016
 - 3. 0.16
 - 4. 1.6

Question ID : 264330153845
Option 1 ID : 264330602844
Option 2 ID : 264330602846
Option 3 ID : 264330602843
Option 4 ID : 264330602845
Status : Answered
Chosen Option : 3

- Q.3** The graph shows the production of tyres (in Lakhs) by three different companies X, Y, and Z over the years.
Directions: Study the following graph carefully to answer the question given below it.



The total production of company Z in 2012 and 2013 is what percentage of the total production of company X in 2010 and 2011?

- Ans**
- 1. 126.3%
 - 2. 133.3%
 - 3. 75%
 - 4. 111.1%

Question ID : 264330153890

Option 1 ID : 264330603025

Option 2 ID : 264330603023

Option 3 ID : 264330603024

Option 4 ID : 264330603026

Status : Answered

Chosen Option : 2

- Q.4** What is the largest number that divides 627, 15630 and 3128 and leaves remainders of 2, 5 and 3, respectively?

- Ans**
- 1. 775
 - 2. 650
 - 3. 625
 - 4. 1225

Question ID : 264330156089

Option 1 ID : 264330611757

Option 2 ID : 264330611758

Option 3 ID : 264330611755

Option 4 ID : 264330611756

Status : Answered

Chosen Option : 3

- Q.5** If P can finish a job in 3 hours and Q can finish the same job in 6 hours independently, then they together will finish the

job in x minutes. Find the value of x .

- Ans**
- 1. 160
 - 2. 100
 - 3. 150
 - 4. 120

Question ID : 264330155972

Option 1 ID : 264330611289

Option 2 ID : 264330611290

Option 3 ID : 264330611287

Option 4 ID : 264330611288

Status : Answered

Chosen Option : 4

Q.6 The ratio of principal and amount is 5 : 6 for one year. Find the rate of simple interest per annum?

- Ans
- 1. 10%
 - 2. 11%
 - 3. 15%
 - 4. 20%

Question ID : 264330158842
Option 1 ID : 264330622727
Option 2 ID : 264330622729
Option 3 ID : 264330622728
Option 4 ID : 264330622730
Status : Answered
Chosen Option : 4

Q.7 A boatman goes 6 km against the current of the stream in 2 hours and goes 1.5 km along the current in 7.5 minutes. How long will (in hours) it take to go 30 km in still water?

- Ans
- 1. 2.5
 - 2. 3.5
 - 3. 3.0
 - 4. 4.0

Question ID : 264330153776
Option 1 ID : 264330602569
Option 2 ID : 264330602570
Option 3 ID : 264330602568
Option 4 ID : 264330602567
Status : Answered
Chosen Option : 4

Q.8 The average height of 25 boys was calculated to be 150 cm. It was detected later that one value of 160 cm was wrongly copied as 135 cm for the computation of the mean. Find the correct mean height (in cm).

- Ans
- 1. 152
 - 2. 158
 - 3. 154
 - 4. 151

Question ID : 264330156097
Option 1 ID : 264330611790
Option 2 ID : 264330611789
Option 3 ID : 264330611787
Option 4 ID : 264330611788
Status : Answered
Chosen Option : 4

Q.9 The marked price of mustard oil is 10% more than its cost price. At what percentage less than the marked price should it be sold to have no profit and no loss?

- Ans**
1. $9\frac{3}{11}\%$
2. $9\frac{2}{11}\%$
3. $9\frac{1}{11}\%$
4. $9\frac{4}{11}\%$

Question ID : 264330156219

Option 1 ID : 264330612277

Option 2 ID : 264330612276

Option 3 ID : 264330612275

Option 4 ID : 264330612278

Status : Answered

Chosen Option : 3

Q.10 A woman jogged every month in 2022 as per the given table. Study the table and answer the question that follows.

Month	Jan	Feb	March	April	May	June	July	Aug	Sept	Oct	Nov	Dec
Distance jogged (in km)	90	60	30	30	30	60	60	90	30	60	90	30

What is the mean distance jogged by the woman in the year 2022?

- Ans**
1. 52.5 km
2. 55 km
3. 50 km
4. 60 km

Question ID : 264330156290

Option 1 ID : 264330612562

Option 2 ID : 264330612559

Option 3 ID : 264330612561

Option 4 ID : 264330612560

Status : Answered

Chosen Option : 2

Q.11 The area of a trapezium is 180 cm^2 and two parallel sides are 28 cm and 12 cm. The distance between these parallel sides is:

- Ans**
1. 9 cm
2. 12 cm
3. 18 cm
4. 15 cm

Question ID : 264330154138

Option 1 ID : 264330604016

Option 2 ID : 264330604015

Option 3 ID : 264330604017

Option 4 ID : 264330604018

Status : Answered

Chosen Option : 1

Q.12 Water is pouring into a cuboidal reservoir at the rate of 50 litres per minute. The volume of the reservoir is 120 m^3 . How many hours will it take to fill the reservoir?

- Ans**
- 1. 35
 - 2. 45
 - 3. 40
 - 4. 30

Question ID : 264330153864
Option 1 ID : 264330602922
Option 2 ID : 264330602919
Option 3 ID : 264330602920
Option 4 ID : 264330602921
Status : Answered
Chosen Option : 3

Q.13 The difference between the compound interest (Compounded annually) and simple interest for an amount of ₹85,000 in 2 years is ₹850. Find the rate of interest per annum.

- Ans**
- 1. 5%
 - 2. 10%
 - 3. 8%
 - 4. 12%

Question ID : 264330156229
Option 1 ID : 264330612315
Option 2 ID : 264330612317
Option 3 ID : 264330612316
Option 4 ID : 264330612318
Status : Answered
Chosen Option : 2

Q.14 ₹3,600 is divided such that half of the first part, one-third of the second part and one-fifth of the third part are the same. The value of the third part is:

- Ans**
- 1. 1080
 - 2. 1000
 - 3. 2400
 - 4. 1800

Question ID : 264330154050
Option 1 ID : 264330603665
Option 2 ID : 264330603666
Option 3 ID : 264330603663
Option 4 ID : 264330603664
Status : Answered
Chosen Option : 4

Q.15 A store sells an item for ₹500, making a profit of 25%. Later, the store reduces the price of the item by 20% to clear out old inventory. What is the new percentage profit or loss for the store?

- Ans**
- 1. 2% profit
 - 2. 5% profit
 - 3. 5% loss
 - 4. No profit, no loss

Question ID : **264330156264**
Option 1 ID : **264330612457**
Option 2 ID : **264330612455**
Option 3 ID : **264330612456**
Option 4 ID : **264330612458**
Status : **Answered**
Chosen Option : **4**

Q.16 Two trains 120 metres and 150 metres long, respectively, are running in the same direction with speeds of 70 km/h and 52 km/h, respectively. In how much time will the first train cross the second? (in seconds)

- Ans**
- 1. 52
 - 2. 60
 - 3. 48
 - 4. 54

Question ID : **264330156008**
Option 1 ID : **264330611431**
Option 2 ID : **264330611434**
Option 3 ID : **264330611432**
Option 4 ID : **264330611433**
Status : **Answered**
Chosen Option : **4**

Q.17 A cyclist travels 15 km at a speed of 10 km/h and then travels another 15 km at a speed of 20 km/h. What is the average speed of the cyclist for the entire journey? (round to two places of decimals)

- Ans**
- 1. 12.32km/h
 - 2. 13.74 km/h
 - 3. 12.72 km/h
 - 4. 13.33 km/h

Question ID : **264330156257**
Option 1 ID : **264330612427**
Option 2 ID : **264330612430**
Option 3 ID : **264330612428**
Option 4 ID : **264330612429**
Status : **Answered**
Chosen Option : **4**

Q.18 Susanth purchased 3 packs of oil at the rate of ₹20 each, 4 packs of oil at ₹21 each and 3 packs of oil at the rate of ₹22 each. What is the average cost of one pack of oil?

- Ans**
- 1. ₹21.5
 - 2. ₹20
 - 3. ₹20.5
 - 4. ₹21

Question ID : 264330153870
Option 1 ID : 264330602946
Option 2 ID : 264330602943
Option 3 ID : 264330602944
Option 4 ID : 264330602945
Status : Answered
Chosen Option : 4

Q.19 A man can finish a work in 12 days and a woman can finish the same in 10 days. 2 men and 3 women work on alternate days and men start the first day. The work will be finished in _____ days.

- Ans**
- 1. $\frac{22}{3}$
 - 2. $\frac{24}{5}$
 - 3. $\frac{22}{5}$
 - 4. $\frac{21}{5}$

Question ID : 264330153815
Option 1 ID : 264330602725
Option 2 ID : 264330602723
Option 3 ID : 264330602726
Option 4 ID : 264330602724
Status : Answered
Chosen Option : 3

Q.20 During the first year, the population of a town increased by 10% and during the next year, the population decreased by 10%. If the total population of the town was 19,800 at the end of the second year, find the population size at the beginning of the first year.

- Ans**
- 1. 20,800
 - 2. 21,000
 - 3. 20,000
 - 4. 21,800

Question ID : 264330155994
Option 1 ID : 264330611377
Option 2 ID : 264330611376
Option 3 ID : 264330611378
Option 4 ID : 264330611375
Status : Answered
Chosen Option : 3

Q.1 In a certain code language, 'GLOAT' is coded as 'EJMYR' and 'INCUR' is coded as 'GLASP'. What is the code for 'PANDA' in the given code language?

- Ans**
- 1. MZMCZ
 - 2. MYMCX
 - 3. NXNBY
 - 4. NYLBY

Question ID : 264330155816

Option 1 ID : 264330610667

Option 2 ID : 264330610669

Option 3 ID : 264330610670

Option 4 ID : 264330610668

Status : Answered

Chosen Option : 4

Q.2 Q, R, S, T, U, V, W and X are sitting around a square table facing the center of the table. Some of them are sitting at the corners while some are sitting at the exact center of the sides. X sits second to the left of W. W sits in one of the corners. V is the immediate neighbour of T and U. R sits third to the left of T. U does not sit in one of the corners. U is neither the neighbour of X nor W. Q is not the neighbour of X.

How many people sit between S and V, when counted from the left of S?

- Ans**
- 1. One
 - 2. Three
 - 3. Four
 - 4. Two

Question ID : 264330155535

Option 1 ID : 264330609546

Option 2 ID : 264330609544

Option 3 ID : 264330609543

Option 4 ID : 264330609545

Status : Answered

Chosen Option : 4

Q.3 What will come in place of '?' in the following equation, if '+' and '×' are interchanged and '-' and '+' are interchanged?

$$1 \times 1 - 1 + 1 + 1 = ?$$

- Ans**
- 1. 11
 - 2. 1
 - 3. 10
 - 4. 21

Question ID : 264330154656

Option 1 ID : 264330606089

Option 2 ID : 264330606088

Option 3 ID : 264330606087

Option 4 ID : 264330606090

Status : Answered

Chosen Option : 2

Q.4 Find out the correct alternative that when filled in the blanks in the same sequence will make the series logically complete.

EFS_ JK_M OPRS _US_ YZ_B

- Ans**
- 1. HSTWS
 - 2. HTBSW
 - 3. JSTBW
 - 4. JTBWS

Question ID : 264330154727
 Option 1 ID : 264330606372
 Option 2 ID : 264330606371
 Option 3 ID : 264330606373
 Option 4 ID : 264330606374
 Status : Answered
 Chosen Option : 1

Q.5 If 7th May 2000 is Sunday, then what will be the day of the week on 15th July 2010?

- Ans**
- 1. Sunday
 - 2. Monday
 - 3. Friday
 - 4. Thursday

Question ID : 264330154331
 Option 1 ID : 264330604788
 Option 2 ID : 264330604787
 Option 3 ID : 264330604789
 Option 4 ID : 264330604790
 Status : Answered
 Chosen Option : 4

Q.6 Read the given statements and conclusions carefully. You have to take the given statements to be true even if they seem to be at variance from commonly known facts. You have to decide which conclusion/s logically follow/s from the given statements.

Statements: Some doughnuts are rocks. All rocks are papers. Some papers are oil.

Conclusion I: Some doughnuts are papers.

Conclusion II: Some rocks are oil.

- Ans**
- 1. Neither conclusion (I) nor (II) is follow.
 - 2. Both conclusions (I) and (II) are follow.
 - 3. Only conclusion (II) is follow.
 - 4. Only conclusion (I) is follow.

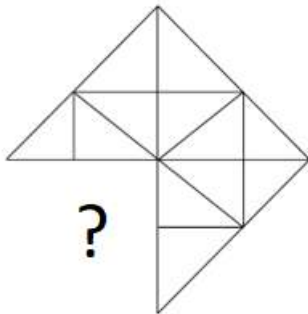
Question ID : 264330155926
 Option 1 ID : 264330611109
 Option 2 ID : 264330611110
 Option 3 ID : 264330611108
 Option 4 ID : 264330611107
 Status : Answered
 Chosen Option : 4

Q.7 What will come in the place of '?' in the following equation, if '+' and '-' are interchanged and '×' and '÷' are interchanged?
 $147 \times 7 \div 8 + 32 - 6 = ?$

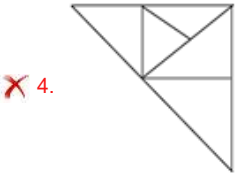
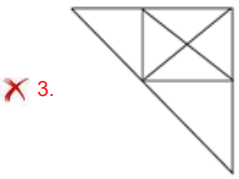
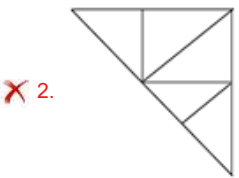
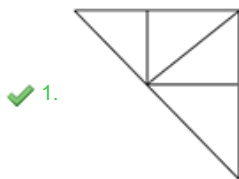
- Ans**
- 1. 132
 - 2. 152
 - 3. 122
 - 4. 142

Question ID : 264330155676
 Option 1 ID : 264330610109
 Option 2 ID : 264330610107
 Option 3 ID : 264330610108
 Option 4 ID : 264330610110
 Status : Answered
 Chosen Option : 4

Q.8 Identify the figure that completes the pattern (rotation is NOT allowed).



Ans



Question ID : 264330154520
 Option 1 ID : 264330605545
 Option 2 ID : 264330605543
 Option 3 ID : 264330605544
 Option 4 ID : 264330605546
 Status : Answered
 Chosen Option : 1

Q.9 Select the set in which the numbers are related in the same way as are the numbers of the following sets.
 (NOTE: Operations should be performed on the whole numbers, without breaking down the numbers into its constituent digits. E.g. 13 – Operations on 13 such as adding / subtracting / multiplying etc. to 13 can be performed. Breaking down 13 into 1 and 3 and then performing mathematical operations on 1 and 3 is not allowed)
 (4, 55, 7)
 (2, 35, 5)

- Ans**
- 1. 41, 156, 7
 - 2. 12, 346, 9
 - 3. 32, 175, 3
 - 4. 19, 122, 8

Question ID : 264330151617
 Option 1 ID : 264330594098
 Option 2 ID : 264330594095
 Option 3 ID : 264330594097
 Option 4 ID : 264330594096
 Status : Answered
 Chosen Option : 3

Q.10 What should come in place of '?' in the given series?

10 52 262 1312 6562 ?

- Ans**
- 1. 32954
 - 2. 31726
 - 3. 32812
 - 4. 31458

Question ID : 264330151472
 Option 1 ID : 264330593518
 Option 2 ID : 264330593516
 Option 3 ID : 264330593517
 Option 4 ID : 264330593515
 Status : Answered
 Chosen Option : 3

Q.11 What should come in place of '?' in the given series?

37 325 2917 ? 236197 2125765 19131877

- Ans**
- 1. 27894
 - 2. 28953
 - 3. 28741
 - 4. 26245

Question ID : 264330151447
 Option 1 ID : 264330593416
 Option 2 ID : 264330593418
 Option 3 ID : 264330593417
 Option 4 ID : 264330593415
 Status : Answered
 Chosen Option : 4

Q.12 DK 18 is related to EM 22 in a certain way. In the same way, ME 25 is related to NG 29. To which of the following is UL 14 related to following the same logic?

- Ans**
- 1. VM 19
 - 2. WN 18
 - 3. XO 17
 - 4. VN 18

Question ID : 264330151667
Option 1 ID : 264330594297
Option 2 ID : 264330594298
Option 3 ID : 264330594296
Option 4 ID : 264330594295
Status : Answered
Chosen Option : 4

Q.13 In a certain code language, 'MINT' is coded as '4735' and 'TIME' is coded as '5483'. What is the code for 'E' in the given code language?

- Ans**
- 1. 8
 - 2. 5
 - 3. 4
 - 4. 3

Question ID : 264330151703
Option 1 ID : 264330594439
Option 2 ID : 264330594440
Option 3 ID : 264330594442
Option 4 ID : 264330594441
Status : Answered
Chosen Option : 1

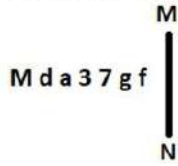
Q.14 Find out the correct alternative that when filled in the blanks in the same sequence will make the series logically complete.

A_BY CZ_Y _ZFY GZH_IZ_Y

- Ans**
- 1. HCJNR
 - 2. ZJDBV
 - 3. BHDKU
 - 4. ZDEYJ

Question ID : 264330154721
Option 1 ID : 264330606350
Option 2 ID : 264330606347
Option 3 ID : 264330606348
Option 4 ID : 264330606349
Status : Answered
Chosen Option : 4

Q.15 Select the correct mirror image of the given figure when the mirror is placed at MN as shown below.



- Ans
- 1. $\text{f g } \angle \text{ } \epsilon \text{ a b M}$
 - 2. $\text{g f } \nabla \text{ } 3 \text{ } \epsilon \text{ P M}$
 - 3. $\text{f g } \nabla \text{ } \epsilon \text{ } \epsilon \text{ b W}$
 - 4. $\text{f g } \nabla \text{ } \epsilon \text{ } \epsilon \text{ b M}$

Question ID : 264330151530

Option 1 ID : 264330593748

Option 2 ID : 264330593750

Option 3 ID : 264330593747

Option 4 ID : 264330593749

Status : Answered

Chosen Option : 4

Q.16 What should come in place of '?' in the given series?

2 24 ? 948 5700 34212 205284

- Ans
- 1. 156
 - 2. 184
 - 3. 119
 - 4. 136

Question ID : 264330151482

Option 1 ID : 264330593557

Option 2 ID : 264330593558

Option 3 ID : 264330593555

Option 4 ID : 264330593556

Status : Answered

Chosen Option : 1

Q.17 Which figure should replace the question mark (?) if the following figure series were to be continued?

V	=	3	△	V	3	O	△	
O		=		C		3		?
△	3	O	V	△	O	C	V	

Ans

✗ 1.

	V	C
	O	
△	3	

✗ 2.

	C	O
	I	
V	△	

✓ 3.

	V	O
	I	
△	C	

✗ 4.

	O	C
	3	
△	V	

Question ID : 264330154743

Option 1 ID : 264330606436

Option 2 ID : 264330606435

Option 3 ID : 264330606437

Option 4 ID : 264330606438

Status : Answered

Chosen Option : 3

Q.18 13 is related to 174 following a certain logic. Following the same logic, 15 is related to 230. To which of the following is 17 related to, following the same logic?

Ans ✗ 1. 291

✗ 2. 292

✗ 3. 293

✓ 4. 294

Question ID : 264330151596

Option 1 ID : 264330594011

Option 2 ID : 264330594012

Option 3 ID : 264330594013

Option 4 ID : 264330594014

Status : Answered

Chosen Option : 4

Q.19 What should come in place of ? in the given series based on the English alphabetical order?

DQK, CPJ, BOI, ANH, ?

- Ans**
- 1. XMF
 - 2. YLF
 - 3. YNF
 - 4. ZMG

Question ID : 264330155768

Option 1 ID : 264330610475

Option 2 ID : 264330610476

Option 3 ID : 264330610478

Option 4 ID : 264330610477

Status : Answered

Chosen Option : 4

Q.20 Read the given statements and conclusions carefully. You have to take the given statements to be true even if they seem to be at variance from commonly known facts. You have to decide which conclusion/s logically follow/s from the given statements.

Statements: Some glass are pink. All pink are bags. Some bags are flowers.

Conclusion I: Some pink are glass.

Conclusion II: Some flowers are bags.

- Ans**
- 1. Only conclusion (II) is follow.
 - 2. Neither conclusion (I) nor (II) is follow.
 - 3. Only conclusion (I) is follow.
 - 4. Both conclusions (I) and (II) are follow.

Question ID : 264330155896

Option 1 ID : 264330610988

Option 2 ID : 264330610989

Option 3 ID : 264330610987

Option 4 ID : 264330610990

Status : Answered

Chosen Option : 4

Section : General Awareness

Q.1 What is the most powerful weapon that enables the Parliament to ensure executive accountability?

- Ans**
- 1. Approval or refusal of laws
 - 2. The no-confidence motion
 - 3. Confirmation of treaties
 - 4. Deliberation and discussion

Question ID : 264330161293

Option 1 ID : 264330632500

Option 2 ID : 264330632502

Option 3 ID : 264330632501

Option 4 ID : 264330632499

Status : Not Attempted and Marked For Review

Chosen Option : --

Q.2 Where is the Mahabodhi temple situated?

- Ans 1. Varanasi
 2. Bodh Gaya
 3. Patna
 4. Agra

Question ID : 264330160762
Option 1 ID : 264330630379
Option 2 ID : 264330630382
Option 3 ID : 264330630381
Option 4 ID : 264330630380
Status : Answered
Chosen Option : 2

Q.3 Which African leader wrote the autobiography ' Long Walk to Freedom'?

- Ans 1. Robert Mugabe
 2. Nelson Mandela
 3. Muammar Gaddafi
 4. Desmond Tutu

Question ID : 264330160959
Option 1 ID : 264330631169
Option 2 ID : 264330631167
Option 3 ID : 264330631170
Option 4 ID : 264330631168
Status : Answered
Chosen Option : 2

Q.4 In which year was the Training of Rural Youth for Self Employment (TRYSEM) scheme launched by Government of India?

- Ans 1. 1991
 2. 2000
 3. 1979
 4. 1965

Question ID : 264330161575
Option 1 ID : 264330633628
Option 2 ID : 264330633630
Option 3 ID : 264330633627
Option 4 ID : 264330633629
Status : Not Attempted and Marked For Review
Chosen Option : --

Q.5 Under the Chief Minister Learn and Earn Scheme of Madhya Pradesh, the government will NOT provide which of the following?

- Ans 1. Financial assistance
 2. Training
 3. Laptops
 4. Employable skills

Question ID : 264330158331
Option 1 ID : 264330620684
Option 2 ID : 264330620686
Option 3 ID : 264330620685
Option 4 ID : 264330620683
Status : Answered
Chosen Option : 1

Q.6 Noted dance historian Dr. Sunil Kothari was awarded Madhabdev Award in 2019 by the Government of Assam for popularising which dance form of the state?

- Ans**
- 1. Bihu
 - 2. Bagurumba
 - 3. Sattriya
 - 4. Ojapali

Question ID : 264330155488

Option 1 ID : 264330609355

Option 2 ID : 264330609358

Option 3 ID : 264330609356

Option 4 ID : 264330609357

Status : **Not Attempted and Marked For Review**

Chosen Option : --

Q.7 What is the usual term used to describe the climate of India?

- Ans**
- 1. Polar climate
 - 2. Tropical monsoon
 - 3. Desert climate
 - 4. Arid climate

Question ID : 264330157825

Option 1 ID : 264330618660

Option 2 ID : 264330618662

Option 3 ID : 264330618659

Option 4 ID : 264330618661

Status : **Answered**

Chosen Option : 2

Q.8 Dandari (Dancing) troupes perform _____ during the festival of Diwali for a fortnight with participation from Kolam and Raj Gond tribes.

- Ans**
- 1. Chhau
 - 2. Baiga Pardhoni
 - 3. Ghusadi
 - 4. Rout Nacha

Question ID : 264330160853

Option 1 ID : 264330630745

Option 2 ID : 264330630746

Option 3 ID : 264330630744

Option 4 ID : 264330630743

Status : **Answered**

Chosen Option : 4

Q.9 How many gold medals did India win at the ISSF Junior World Cup 2023?

- Ans
- 1. 7
 - 2. 8
 - 3. 5
 - 4. 6

Question ID : 264330161130

Option 1 ID : 264330631852

Option 2 ID : 264330631854

Option 3 ID : 264330631853

Option 4 ID : 264330631851

Status : **Not Attempted and Marked For Review**

Chosen Option : --

Q.10 _____ is the first Indian woman to have won a Grammy.

- Ans
- 1. Tanvi Shah
 - 2. Shalmali Kholgade
 - 3. Palak Muchhal
 - 4. Shilpa Rao

Question ID : 264330155472

Option 1 ID : 264330609293

Option 2 ID : 264330609291

Option 3 ID : 264330609292

Option 4 ID : 264330609294

Status : **Answered**

Chosen Option : 1

Q.11 Which Indian musician personality's native place is West Bengal?

- Ans
- 1. Naushad
 - 2. OP Nayyar
 - 3. Ilayaraja
 - 4. Bappi Lahiri

Question ID : 264330162236

Option 1 ID : 264330636273

Option 2 ID : 264330636274

Option 3 ID : 264330636272

Option 4 ID : 264330636271

Status : **Answered**

Chosen Option : 4

Q.12 According to the Census of India 2011, which State/Union Territory has the lowest sex ratio?

- Ans 1. Punjab
 2. Lakshadweep
 3. Daman and Diu
 4. Haryana

Question ID : 264330160154
Option 1 ID : 264330627955
Option 2 ID : 264330627956
Option 3 ID : 264330627957
Option 4 ID : 264330627958
Status : Answered
Chosen Option : 4

Q.13 Which of the following is an autobiography of the famous cricketer Sourav Ganguly?

- Ans 1. A Shot at History
 2. The Dream of Revolution
 3. A Century is not enough
 4. Memories of My Life and Times

Question ID : 264330162283
Option 1 ID : 264330636459
Option 2 ID : 264330636460
Option 3 ID : 264330636461
Option 4 ID : 264330636462
Status : Answered
Chosen Option : 3

Q.14 Consider the following statement about the Government of India Act, 1935.

1. This act was enacted by the British Parliament.
2. This Act was divided into two separate acts for India and Burma Government.
3. This act was commenced from the 1 April 1935.

Select the correct statement(s) using the code given below.

- Ans 1. Both 1 and 2
 2. 1, 2 and 3
 3. Both 2 and 3
 4. Both 1 and 3

Question ID : 264330160879
Option 1 ID : 264330630847
Option 2 ID : 264330630850
Option 3 ID : 264330630849
Option 4 ID : 264330630848
Status : Not Attempted and Marked For Review
Chosen Option : --

Q.15 Who among the following established a unit of horsepower that is equal to one horse doing 33,000 foot - pounds of work in one minute?

- Ans 1. James Black
 2. James Croll
 3. James Watt
 4. James Dwight Dana

Question ID : 264330161401
Option 1 ID : 264330632932
Option 2 ID : 264330632933
Option 3 ID : 264330632931
Option 4 ID : 264330632934
Status : Answered
Chosen Option : 3

Q.16 In which year was the 42nd Constitutional Amendment Act passed?

- Ans 1. 1978
 2. 1976
 3. 1998
 4. 1986

Question ID : 264330159898
Option 1 ID : 264330626940
Option 2 ID : 264330626939
Option 3 ID : 264330626942
Option 4 ID : 264330626941
Status : Answered
Chosen Option : 2

Q.17 Who among the following leaders led the Revolt of 1857 in Bihar?

- Ans 1. Rajendra Prasad
 2. Devi Singh
 3. Rajkumar Shukla
 4. Kunwar Singh

Question ID : 264330162325
Option 1 ID : 264330636629
Option 2 ID : 264330636627
Option 3 ID : 264330636630
Option 4 ID : 264330636628
Status : Answered
Chosen Option : 4

Q.18 Shri Jagannathji Mela is held at _____.

- Ans 1. Cuttack
 2. Sambalpur
 3. Jaipur
 4. Alwar

Question ID : 264330159087
Option 1 ID : 264330623708
Option 2 ID : 264330623710
Option 3 ID : 264330623709
Option 4 ID : 264330623707
Status : Answered
Chosen Option : 1

Q.19 _____ literally means 'dance of the enchantress'. It is one of the most striking in the Indian classical dance repertoire.

- Ans
- 1. Kuchipudi
 - 2. Mohiniyattam
 - 3. Kathakali
 - 4. Bharatanatyam

Question ID : 264330160789
Option 1 ID : 264330630490
Option 2 ID : 264330630488
Option 3 ID : 264330630487
Option 4 ID : 264330630489
Status : Answered
Chosen Option : 3

Q.20 The important milestones of the SHG Bank linkage movement was spearheaded by _____ with support from RBI.

- Ans
- 1. SEBI
 - 2. Indian Bank
 - 3. NABARD
 - 4. Cooperative Bank

Question ID : 264330161454
Option 1 ID : 264330633144
Option 2 ID : 264330633143
Option 3 ID : 264330633145
Option 4 ID : 264330633146
Status : Not Attempted and Marked For Review
Chosen Option : --

Q.21 Narendra Modi Cricket Stadium is one of the premier stadiums in India located at _____.

- Ans
- 1. Ahmedabad
 - 2. New Delhi
 - 3. Baroda
 - 4. Surat

Question ID : 264330158241
Option 1 ID : 264330620323
Option 2 ID : 264330620324
Option 3 ID : 264330620325
Option 4 ID : 264330620326
Status : Answered
Chosen Option : 1

Q.22 The pre-monsoon showers are known as _____ in Kerala and Karnataka.

- Ans
- 1. tea showers
 - 2. grapes showers
 - 3. banana showers
 - 4. mango showers

Question ID : 264330161515

Option 1 ID : 264330633387

Option 2 ID : 264330633390

Option 3 ID : 264330633389

Option 4 ID : 264330633388

Status : **Not Attempted and Marked For Review**

Chosen Option : --

Q.23 Insufficient levels of parathyroid hormone and low amount of calcium in the blood causes which of the following conditions?

- Ans
- 1. Malaria
 - 2. Anaemia
 - 3. Diabetes
 - 4. Hypocalcemia

Question ID : 264330156612

Option 1 ID : 264330613838

Option 2 ID : 264330613836

Option 3 ID : 264330613837

Option 4 ID : 264330613835

Status : **Not Attempted and Marked For Review**

Chosen Option : --

Q.24 Team Rest of India won Irani Cup in 2023. Irani Cup was hosted in which state?

- Ans
- 1. Madhya Pradesh
 - 2. West Bengal
 - 3. Bihar
 - 4. Uttar Pradesh

Question ID : 264330158353

Option 1 ID : 264330620772

Option 2 ID : 264330620774

Option 3 ID : 264330620771

Option 4 ID : 264330620773

Status : **Answered**

Chosen Option : 1

Q.25 What is a dimension related to the sustainability of microfinance institutions in India?

- Ans** 1. Dependency on donor funding
 2. Limited social impact
 3. High-profit margins
 4. Excessive interest rates

Question ID : 264330157294
Option 1 ID : 264330616540
Option 2 ID : 264330616542
Option 3 ID : 264330616539
Option 4 ID : 264330616541
Status : Answered
Chosen Option : 1

Section : English Language and Comprehension

Q.1 The sentence given below contains some spelling errors. Select the option that has the correct spellings.

Members of the asociation have succesfully climbed several paeks of the Himalayan range.

- Ans** 1. Members of the associattion have succesfully climbed several paeks of the Himalayan range.
 2. Meembers of the associatiion have successfuly climbed several peaks of the Himalayan range.
 3. Members of the associasion have succesfully climbed several paiks of the Himalayan range.
 4. Members of the association have successfully climbed several peaks of the Himalayan range.

Question ID : 264330153541
Option 1 ID : 264330601667
Option 2 ID : 264330601669
Option 3 ID : 264330601670
Option 4 ID : 264330601668
Status : Answered
Chosen Option : 4

Q.2 Choose the sentence that contains an error.

- Ans** 1. The Mona Lisa is a famous painting by Leonardo da Vinci.
 2. She is the only person who can speak five languages fluently.
 3. He is a doctor who specialises in the treating rare diseases.
 4. I saw the movie that won the Academy Award for Best Picture.

Question ID : 264330155180
Option 1 ID : 264330608179
Option 2 ID : 264330608181
Option 3 ID : 264330608182
Option 4 ID : 264330608180
Status : Answered
Chosen Option : 3

Q.3 The following sentence has been split into four segments. Identify the segment that contains a spelling error.

The conference / attempts to / trace the processes and / consequences of climate change.

Ans 1. consequences of climate change

2. The conference

3. attempts to

4. trace the processes and

Question ID : 264330155314

Option 1 ID : 264330608698

Option 2 ID : 264330608695

Option 3 ID : 264330608696

Option 4 ID : 264330608697

Status : Answered

Chosen Option : 2

Q.4 Select the word segment which substitutes the bracketed word correctly and completes the sentence meaningfully.

Mathematics (are not) easy to learn.

Ans 1. were not

2. was not

3. has not

4. is not

Question ID : 264330152567

Option 1 ID : 264330597873

Option 2 ID : 264330597872

Option 3 ID : 264330597874

Option 4 ID : 264330597871

Status : Answered

Chosen Option : 4

Q.5 Select the option that can be used as a one-word substitute for the given group of words.

The action of formally accusing a public official of a serious offence

Ans 1. Impeachment

2. Condemnation

3. Summon

4. Allegation

Question ID : 264330151870

Option 1 ID : 264330595099

Option 2 ID : 264330595101

Option 3 ID : 264330595100

Option 4 ID : 264330595102

Status : Answered

Chosen Option : 1

Q.6 Select the option that can be used as a one-word substitute for the given group of words.

A number which is used to divide another number

- Ans
- 1. Divisible
 - 2. Quotient
 - 3. Remainder
 - 4. Divisor

Question ID : 264330153456

Option 1 ID : 264330601341

Option 2 ID : 264330601340

Option 3 ID : 264330601342

Option 4 ID : 264330601339

Status : Answered

Chosen Option : 4

Q.7 Select the most appropriate meaning of the given idiom.

To cut someone some slack

- Ans
- 1. Avoid talking about problems till the very end
 - 2. To get the conversation going
 - 3. To criticise someone very strictly
 - 4. To not manage someone very strictly or critically

Question ID : 264330153009

Option 1 ID : 264330599608

Option 2 ID : 264330599609

Option 3 ID : 264330599607

Option 4 ID : 264330599610

Status : Answered

Chosen Option : 3

Q.8 Select the most appropriate idiom to fill in the blank.

Our trainer asked for _____ on her for the next informative session.

- Ans
- 1. chasing rainbows
 - 2. being around the bend
 - 3. all eyes and ears
 - 4. going bananas

Question ID : 264330153561

Option 1 ID : 264330601745

Option 2 ID : 264330601744

Option 3 ID : 264330601743

Option 4 ID : 264330601746

Status : Answered

Chosen Option : 3

Q.9 Select the **INCORRECTLY** spelt word in the given sentence.
Children below the age of 14 were not allowed to partisipate in the cooking competition.

- Ans
- 1. Competition
 - 2. Partisipate
 - 3. Children
 - 4. Allowed

Question ID : 264330153301
Option 1 ID : 264330600762
Option 2 ID : 264330600761
Option 3 ID : 264330600759
Option 4 ID : 264330600760
Status : Answered
Chosen Option : 2

Q.10 The following sentence has been split into four segments. Identify the segment that contains a grammatical error.
After I complete my training program / I will have been joining a team of astronauts / and preparing to / embark on a mission to Mars.

- Ans
- 1. I will have been joining a team of astronauts
 - 2. embark on a mission to Mars
 - 3. and preparing to
 - 4. After I complete my training program

Question ID : 264330144176
Option 1 ID : 264330564968
Option 2 ID : 264330564970
Option 3 ID : 264330564969
Option 4 ID : 264330564967
Status : Answered
Chosen Option : 3

Q.11 The given sentence contains an error. Select the option that correctly rectifies the error.
Earlier, he was feeling better, but things took a turn for the bad.

- Ans
- 1. Earlier, he was feeling better, but things took a turn for the worst.
 - 2. Earlier, he was feeling good, but things took a turn for the bad.
 - 3. Earlier, he was feeling well, but things took a turn for the ill.
 - 4. Earlier, he was feeling better, but things took a turn for the ill.

Question ID : 264330152609
Option 1 ID : 264330598040
Option 2 ID : 264330598041
Option 3 ID : 264330598039
Option 4 ID : 264330598042
Status : Answered
Chosen Option : 1

Q.12 Select the most appropriate meaning of the given idiom.

Blessing in disguise

- Ans 1. Something that seems good but is harmful for you
 2. Something that seems bad but provides some benefit
 3. Something that cannot be hidden from anyone
 4. Something that remains hidden from everyone

Question ID : 264330153010
Option 1 ID : 264330599611
Option 2 ID : 264330599612
Option 3 ID : 264330599613
Option 4 ID : 264330599614
Status : Answered
Chosen Option : 2

Q.13 Select the most appropriate ANTONYM of the given word.
Break

- Ans 1. Divide
 2. Mend
 3. Split
 4. Breach

Question ID : 264330153556
Option 1 ID : 264330601725
Option 2 ID : 264330601724
Option 3 ID : 264330601726
Option 4 ID : 264330601723
Status : Answered
Chosen Option : 2

Q.14 Select the option that can be used as a one-word substitute for the given group of words.

A place of burial

- Ans 1. Building
 2. Laboratory
 3. Cemetery
 4. Observatory

Question ID : 264330153360
Option 1 ID : 264330600994
Option 2 ID : 264330600992
Option 3 ID : 264330600991
Option 4 ID : 264330600993
Status : Answered
Chosen Option : 3

Q.15 Select the most appropriate ANTONYM of the given word.
Forthcoming

- Ans 1. Large
 2. Extensive
 3. Adventurous
 4. Past

Question ID : 264330151912
Option 1 ID : 264330595265
Option 2 ID : 264330595264
Option 3 ID : 264330595266
Option 4 ID : 264330595263
Status : Answered
Chosen Option : 4

Q.16 Parts of the following sentence have been given as options. Select the option that contains an error.

I will celebrating New Year at my old residence as usual.

- Ans 1. I
 2. will celebrating
 3. New Year
 4. at my old residence as usual.

Question ID : 264330155229
Option 1 ID : 264330608371
Option 2 ID : 264330608372
Option 3 ID : 264330608373
Option 4 ID : 264330608374
Status : Answered
Chosen Option : 2

Q.17 The following sentence has been divided into parts. One of them may contain an error. Select the part that contains the error from the given options. If you don't find any error, mark 'No error' as your answer.
Why don't / you throw this / paper on the dust bin?

- Ans 1. paper on the dust bin
 2. No error
 3. you throw this
 4. Why don't

Question ID : 264330150527
Option 1 ID : 264330589753
Option 2 ID : 264330589754
Option 3 ID : 264330589752
Option 4 ID : 264330589751
Status : Answered
Chosen Option : 1

Q.18 Select the most appropriate meaning of the given idiom.
Beat around the bush

- Ans
- 1. To be persistent in pursuing a goal
 - 2. To be impatient and short-tempered
 - 3. To be direct and formal
 - 4. To avoid addressing a topic correctly

Question ID : 264330143943
Option 1 ID : 264330564037
Option 2 ID : 264330564038
Option 3 ID : 264330564035
Option 4 ID : 264330564036
Status : Answered
Chosen Option : 4

Q.19 Select the most appropriate option to fill in the blank.
Her stories paid _____ to her mother, whom she regarded as the goddess of bravery.

- Ans
- 1. frustration
 - 2. sainthood
 - 3. absoluteness
 - 4. homage

Question ID : 264330153552
Option 1 ID : 264330601707
Option 2 ID : 264330601710
Option 3 ID : 264330601708
Option 4 ID : 264330601709
Status : Answered
Chosen Option : 4

Q.20 Select the most appropriate synonym of the given word.
Amicable

- Ans
- 1. Friendly
 - 2. Proud
 - 3. Generous
 - 4. Harsh

Question ID : 264330152749
Option 1 ID : 264330598596
Option 2 ID : 264330598597
Option 3 ID : 264330598598
Option 4 ID : 264330598595
Status : Answered
Chosen Option : 1

Comprehension:

In the following passage, some words have been deleted. Read the passage carefully and select the most appropriate option to fill in each blank.

Once, there was a boy who became bored when he watched over the village sheep (1)_____ on the hillside. To entertain himself, he sang out, "Wolf! Wolf! The wolf is chasing the sheep!" When the villagers heard the cry, they came (2)_____ the hill to drive the wolf away. But, when they arrived, they saw no wolf. The boy was amused when seeing their angry faces. "Don't scream wolf, boy," warned the villagers, "when there is no wolf!" They angrily went back down the hill. Later, the shepherd boy cried out once again, "Wolf! Wolf! The wolf is chasing the sheep!" When the villagers came, they saw there was no wolf, they said strictly, "Save your (3)_____ cry for when there is really a wolf! Don't cry 'wolf' when there is no wolf!" Later, the boy saw a real wolf sneaking around his flock. Alarmed, he jumped on his feet and cried out as loud as he could, "Wolf! Wolf!" But the villagers thought he was (4)_____ them again, and so they didn't come to help. At sunset, the villagers went looking for the boy who hadn't returned with their sheep. When they went up the hill, they found him (5)_____ as all the sheep were dead.

SubQuestion No : 21

Q.21 Select the most appropriate option to fill in blank number 1.

- Ans 1. laughing
 2. receiving
 3. assisting
 4. grazing

Question ID : 264330153531
 Option 1 ID : 264330601627
 Option 2 ID : 264330601630
 Option 3 ID : 264330601628
 Option 4 ID : 264330601629
 Status : Answered
 Chosen Option : 4

Comprehension:

In the following passage, some words have been deleted. Read the passage carefully and select the most appropriate option to fill in each blank.

Once, there was a boy who became bored when he watched over the village sheep (1)_____ on the hillside. To entertain himself, he sang out, "Wolf! Wolf! The wolf is chasing the sheep!" When the villagers heard the cry, they came (2)_____ the hill to drive the wolf away. But, when they arrived, they saw no wolf. The boy was amused when seeing their angry faces. "Don't scream wolf, boy," warned the villagers, "when there is no wolf!" They angrily went back down the hill. Later, the shepherd boy cried out once again, "Wolf! Wolf! The wolf is chasing the sheep!" When the villagers came, they saw there was no wolf, they said strictly, "Save your (3)_____ cry for when there is really a wolf! Don't cry 'wolf' when there is no wolf!" Later, the boy saw a real wolf sneaking around his flock. Alarmed, he jumped on his feet and cried out as loud as he could, "Wolf! Wolf!" But the villagers thought he was (4)_____ them again, and so they didn't come to help. At sunset, the villagers went looking for the boy who hadn't returned with their sheep. When they went up the hill, they found him (5)_____ as all the sheep were dead.

SubQuestion No : 22

Q.22 Select the most appropriate option to fill in blank number 2.

- Ans 1. driving
 2. walking down
 3. running down
 4. running up

Question ID : 264330153532
 Option 1 ID : 264330601632
 Option 2 ID : 264330601633
 Option 3 ID : 264330601634
 Option 4 ID : 264330601631
 Status : Answered
 Chosen Option : 4

Comprehension:

In the following passage, some words have been deleted. Read the passage carefully and select the most appropriate option to fill in each blank.

Once, there was a boy who became bored when he watched over the village sheep (1)_____ on the hillside. To entertain himself, he sang out, "Wolf! Wolf! The wolf is chasing the sheep!" When the villagers heard the cry, they came (2)_____ the hill to drive the wolf away. But, when they arrived, they saw no wolf. The boy was amused when seeing their angry faces. "Don't scream wolf, boy," warned the villagers, "when there is no wolf!" They angrily went back down the hill. Later, the shepherd boy cried out once again, "Wolf! Wolf! The wolf is chasing the sheep!" When the villagers came, they saw there was no wolf, they said strictly, "Save your (3)_____ cry for when there is really a wolf! Don't cry 'wolf' when there is no wolf!" Later, the boy saw a real wolf sneaking around his flock. Alarmed, he jumped on his feet and cried out as loud as he could, "Wolf! Wolf!" But the villagers thought he was (4)_____ them again, and so they didn't come to help. At sunset, the villagers went looking for the boy who hadn't returned with their sheep. When they went up the hill, they found him (5)_____ as all the sheep were dead.

SubQuestion No : 23

Q.23 Select the most appropriate option to fill in blank number 3.

- Ans 1. frightened
 2. laughable
 3. funny
 4. muffled

Question ID : 264330153533

Option 1 ID : 264330601636

Option 2 ID : 264330601637

Option 3 ID : 264330601635

Option 4 ID : 264330601638

Status : Answered

Chosen Option : 1

Comprehension:

In the following passage, some words have been deleted. Read the passage carefully and select the most appropriate option to fill in each blank.

Once, there was a boy who became bored when he watched over the village sheep (1)_____ on the hillside. To entertain himself, he sang out, "Wolf! Wolf! The wolf is chasing the sheep!" When the villagers heard the cry, they came (2)_____ the hill to drive the wolf away. But, when they arrived, they saw no wolf. The boy was amused when seeing their angry faces. "Don't scream wolf, boy," warned the villagers, "when there is no wolf!" They angrily went back down the hill. Later, the shepherd boy cried out once again, "Wolf! Wolf! The wolf is chasing the sheep!" When the villagers came, they saw there was no wolf, they said strictly, "Save your (3)_____ cry for when there is really a wolf! Don't cry 'wolf' when there is no wolf!" Later, the boy saw a real wolf sneaking around his flock. Alarmed, he jumped on his feet and cried out as loud as he could, "Wolf! Wolf!" But the villagers thought he was (4)_____ them again, and so they didn't come to help. At sunset, the villagers went looking for the boy who hadn't returned with their sheep. When they went up the hill, they found him (5)_____ as all the sheep were dead.

SubQuestion No : 24

Q.24 Select the most appropriate option to fill in blank number 4.

- Ans 1. fooling
 2. questioning
 3. fighting
 4. seeing

Question ID : 264330153534

Option 1 ID : 264330601642

Option 2 ID : 264330601640

Option 3 ID : 264330601639

Option 4 ID : 264330601641

Status : Answered

Chosen Option : 1

Comprehension:

In the following passage, some words have been deleted. Read the passage carefully and select the most appropriate option to fill in each blank.

Once, there was a boy who became bored when he watched over the village sheep (1)_____ on the hillside. To entertain himself, he sang out, "Wolf! Wolf! The wolf is chasing the sheep!" When the villagers heard the cry, they came (2)_____ the hill to drive the wolf away. But, when they arrived, they saw no wolf. The boy was amused when seeing their angry faces. "Don't scream wolf, boy," warned the villagers, "when there is no wolf!" They angrily went back down the hill. Later, the shepherd boy cried out once again, "Wolf! Wolf! The wolf is chasing the sheep!" When the villagers came, they saw there was no wolf, they said strictly, "Save your (3)_____ cry for when there is really a wolf! Don't cry 'wolf' when there is no wolf!" Later, the boy saw a real wolf sneaking around his flock. Alarmed, he jumped on his feet and cried out as loud as he could, "Wolf! Wolf!" But the villagers thought he was (4)_____ them again, and so they didn't come to help. At sunset, the villagers went looking for the boy who hadn't returned with their sheep. When they went up the hill, they found him (5)_____ as all the sheep were dead.

SubQuestion No : 25

Q.25 Select the most appropriate option to fill in blank number 5.

- Ans 1. singing
 2. happy
 3. dancing
 4. weeping

Question ID : **264330153535**

Option 1 ID : **264330601644**

Option 2 ID : **264330601646**

Option 3 ID : **264330601645**

Option 4 ID : **264330601643**

Status : **Answered**

Chosen Option : **4**