

SSC MTS 2023 Tier 1 Sept 5 Shift 1 Question Paper with Answers

Roll Number	
Candidate Name	
Exam Date	05/09/2023
Exam Time	9:00 AM - 11:00 AM
Subject	MTS Non Tech Havaladar CBIC and CBN Examination 2023

Section : Numerical and Mathematical Ability

Q.1 Apples are bought at 25 for ₹250 and sold at 30 for ₹390. What is the profit/loss percentage in this transaction?

- Ans**
- 1. 25% Profit
 - 2. 30% Profit
 - 3. 25% Loss
 - 4. 30% Loss

Question ID : 264330155707

Option 1 ID : 264330610231

Option 2 ID : 264330610233

Option 3 ID : 264330610232

Option 4 ID : 264330610234

Status : Answered

Chosen Option : 1

Q.2 The average height of a class of 50 students is 170 cm. What will be the average height (in cm, rounded off to the nearest integer) of the rest of the students if the average height of 15 of the students is 180 cm?

- Ans**
- 1. 162
 - 2. 166
 - 3. 175
 - 4. 174

Question ID : 264330153761

Option 1 ID : 264330602510

Option 2 ID : 264330602508

Option 3 ID : 264330602507

Option 4 ID : 264330602509

Status : Answered

Chosen Option : 2

Q.3 A sum of ₹5,345, when invested at a certain rate of simple interest per annum for 10 years, earns an interest of ₹2,672.50 on maturity. What is the rate of simple interest per annum?

- Ans**
- 1. 4.5%
 - 2. 8%
 - 3. 5%
 - 4. 6.5%

Question ID : **264330156486**
Option 1 ID : **264330613333**
Option 2 ID : **264330613331**
Option 3 ID : **264330613332**
Option 4 ID : **264330613334**
Status : **Answered**
Chosen Option : **3**

Q.4 Find the number of solid lead balls each 2 cm in diameter that can be made from solid sphere made up of lead of diameter 14 cm.

- Ans**
- 1. 433
 - 2. 343
 - 3. 430
 - 4. 340

Question ID : **264330156017**
Option 1 ID : **264330611469**
Option 2 ID : **264330611468**
Option 3 ID : **264330611467**
Option 4 ID : **264330611470**
Status : **Answered**
Chosen Option : **2**

Q.5 The speed of a boat in still water is 30 km/h and the speed of the stream is 7.5 km/h. What is the time in hours taken by the boat in the stream to go from point A to B and then back to A covering a total distance of 90 km?

- Ans**
- 1. 3.2
 - 2. 2.8
 - 3. 3.4
 - 4. 3.0

Question ID : **264330153814**
Option 1 ID : **264330602721**
Option 2 ID : **264330602719**
Option 3 ID : **264330602722**
Option 4 ID : **264330602720**
Status : **Answered**
Chosen Option : **2**

Q.6 What is the average of the first 13 multiples of 3?

- Ans 1. 21
 2. 39
 3. 42
 4. 35

Question ID : 264330155725
Option 1 ID : 264330610304
Option 2 ID : 264330610303
Option 3 ID : 264330610306
Option 4 ID : 264330610305
Status : Answered
Chosen Option : 1

Q.7 ₹1,250 at 12% per annum compounded annually will amount to ₹1,568 in:

- Ans 1. 4 years
 2. 1 year
 3. 2 years
 4. 3 years

Question ID : 264330153880
Option 1 ID : 264330602986
Option 2 ID : 264330602983
Option 3 ID : 264330602984
Option 4 ID : 264330602985
Status : Not Answered
Chosen Option : --

Q.8 The speed of a car is 90 km/h. The distance covered by the car in 7 Seconds will be:

- Ans 1. 172 metres
 2. 175 metres
 3. 170 metres
 4. 180 metres

Question ID : 264330155968
Option 1 ID : 264330611274
Option 2 ID : 264330611273
Option 3 ID : 264330611272
Option 4 ID : 264330611271
Status : Answered
Chosen Option : 2

Q.9 Anil works 3 times as fast as Sumit. If Sumit can complete a work in 12 days independently, then the number of days in which Anil and Sumit can together finish the work will be:

- Ans**
- 1. 2
 - 2. 3
 - 3. 4
 - 4. 5

Question ID : 264330156236

Option 1 ID : 264330612343

Option 2 ID : 264330612344

Option 3 ID : 264330612345

Option 4 ID : 264330612346

Status : Answered

Chosen Option : 2

Q.10 The following graph refers to the distance jogged daily by two persons A and B.



If 100 calories are burnt by jogging 1 km, what is the difference between the calories burnt by A and B in the given week?

- Ans**
- 1. 150 calories
 - 2. 10 calories
 - 3. 100 calories
 - 4. 50 calories

Question ID : 264330154099

Option 1 ID : 264330603861

Option 2 ID : 264330603862

Option 3 ID : 264330603860

Option 4 ID : 264330603859

Status : Answered

Chosen Option : 4

Q.11 Vaishali booked a bus ticket for ₹1,260. Because of her ill health, she had to cancel the ticket. She got a refund of ₹945 in this process. What is the percentage loss that Vaishali had to face?

- Ans**
- 1. 23%
 - 2. 15%
 - 3. 25%
 - 4. 33%

Question ID : 264330155703

Option 1 ID : 264330610216

Option 2 ID : 264330610215

Option 3 ID : 264330610217

Option 4 ID : 264330610218

Status : Answered

Chosen Option : 3

Q.12 Three numbers are in the ratio of 3 : 4 : 5 and their HCF is 18. What is the sum of these numbers?

- Ans**
- 1. 198
 - 2. 216
 - 3. 234
 - 4. 180

Question ID : 264330155683
Option 1 ID : 264330610136
Option 2 ID : 264330610137
Option 3 ID : 264330610138
Option 4 ID : 264330610135
Status : Answered
Chosen Option : 2

Q.13 If two varieties of a grain worth ₹202 per kg and ₹250 per kg, respectively, are mixed in the ratio of 7 : 5, then what is the cost (in ₹) of the resulting mixture per kg?

- Ans**
- 1. 225
 - 2. 218
 - 3. 222
 - 4. 220

Question ID : 264330155693
Option 1 ID : 264330610178
Option 2 ID : 264330610175
Option 3 ID : 264330610177
Option 4 ID : 264330610176
Status : Not Answered
Chosen Option : --

Q.14 Akash is thrice as good a workman as Arvind and therefore is able to finish a job in 30 days less than Arvind. If they work together, in how many days can they finish the job?

- Ans**
- 1. $11\frac{1}{4}$
 - 2. $11\frac{3}{4}$
 - 3. $12\frac{3}{4}$
 - 4. $12\frac{1}{4}$

Question ID : 264330156117
Option 1 ID : 264330611867
Option 2 ID : 264330611868
Option 3 ID : 264330611870
Option 4 ID : 264330611869
Status : Not Answered
Chosen Option : --

Q.15 Find the value of x if $15\frac{2}{3} \times 3\frac{1}{6} + 6\frac{1}{3} = 11\frac{7}{18} + x$

- Ans
- 1. $137\frac{4}{9}$
 - 2. $44\frac{5}{9}$
 - 3. $29\frac{7}{9}$
 - 4. $39\frac{5}{9}$

Question ID : 264330156335

Option 1 ID : 264330612740

Option 2 ID : 264330612742

Option 3 ID : 264330612741

Option 4 ID : 264330612739

Status : Answered

Chosen Option : 2

Q.16 The following table gives the number of employees in different departments of an organisation and percentage of females and males. Study the table carefully and answer the question.

Department	Total No. of employees	% of females	% of males
IT	640	45	55
Accounts	220	40	60
Production	800	30	70
HR	360	65	35
Marketing	400	40	60

Find the ratio of the number of females in production and HR departments together to the number of males in the IT and Accounts departments together.

- Ans
- 1. 237 : 242
 - 2. 227 : 323
 - 3. 235 : 330
 - 4. 235 : 340

Question ID : 264330156013

Option 1 ID : 264330611453

Option 2 ID : 264330611452

Option 3 ID : 264330611451

Option 4 ID : 264330611454

Status : Answered

Chosen Option : 1

Q.17 What is the total surface area (in cm^2) of a cone with a base radius of 28 cm and height of 45 cm? (use $\pi = \frac{22}{7}$)

- Ans
- 1. 8168
 - 2. 6288
 - 3. 7128
 - 4. 9216

Question ID : 264330156540
 Option 1 ID : 264330613547
 Option 2 ID : 264330613550
 Option 3 ID : 264330613548
 Option 4 ID : 264330613549
 Status : Answered
 Chosen Option : 4

Q.18 Arrange the ratios in ascending order $5 : 3\frac{1}{3}$, $6\frac{1}{4} : 3\frac{1}{8}$ and $3.5 : 4.5$.

- Ans
- 1. $3.5 : 4.5 < 5 : 3\frac{1}{3} < 6\frac{1}{4} : 3\frac{1}{8}$
 - 2. $6\frac{1}{4} : 3\frac{1}{8} < 5 : 3\frac{1}{3} < 3.5 : 4.5$
 - 3. $5 : 3\frac{1}{3} < 3.5 : 4.5 < 6\frac{1}{4} : 3\frac{1}{8}$
 - 4. $5 : 3\frac{1}{3} < 6\frac{1}{4} : 3\frac{1}{8} < 3.5 : 4.5$

Question ID : 264330153766
 Option 1 ID : 264330602530
 Option 2 ID : 264330602527
 Option 3 ID : 264330602528
 Option 4 ID : 264330602529
 Status : Not Answered
 Chosen Option : --

Q.19 If $15x = 24y = 32z$, then $x : y : z$ is equal to:

- Ans
- 1. 32 : 15 : 20
 - 2. 15 : 24 : 32
 - 3. 32 : 20 : 15
 - 4. 24 : 15 : 4

Question ID : 264330153875
 Option 1 ID : 264330602965
 Option 2 ID : 264330602964
 Option 3 ID : 264330602966
 Option 4 ID : 264330602963
 Status : Not Answered
 Chosen Option : --

Q.20 The incomes of P, Q and R are in the ratio of 9 : 15 : 10 and their savings are in the ratio is 10 : 15 : 12. If R spends 60% of his income, what is the ratio of the expenditures of P, Q and R?

- Ans**
- 1. 18 : 17 : 30
 - 2. 17 : 30 : 18
 - 3. 17 : 18 : 30
 - 4. 18 : 30 : 17

Question ID : 264330153763
Option 1 ID : 264330602518
Option 2 ID : 264330602517
Option 3 ID : 264330602516
Option 4 ID : 264330602515
Status : Not Answered
Chosen Option : --

Section : Reasoning Ability and Problem Solving

Q.1 What should come in place of the question mark (?) in the given series based on the English alphabetical order?

MQA, NRE, OSI, PTM, ?

- Ans**
- 1. RVO
 - 2. QWN
 - 3. QUQ
 - 4. SUM

Question ID : 264330156297
Option 1 ID : 264330612588
Option 2 ID : 264330612587
Option 3 ID : 264330612589
Option 4 ID : 264330612590
Status : Answered
Chosen Option : 3

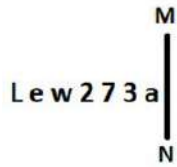
Q.2 Select the combination of letters that when sequentially placed in the blanks of the given series, will complete the series.

_ML_MLLM_L__

- Ans**
- 1. MLMML
 - 2. MMLMM
 - 3. LLLML
 - 4. LLMLM

Question ID : 264330151639
Option 1 ID : 264330594186
Option 2 ID : 264330594184
Option 3 ID : 264330594183
Option 4 ID : 264330594185
Status : Answered
Chosen Option : 3

Q.3 Select the correct mirror image of the given figure when the mirror is placed at MN as shown below.



- Ans
- 1.
 - 2.
 - 3.
 - 4.

Question ID : 264330151502

Option 1 ID : 264330593635

Option 2 ID : 264330593637

Option 3 ID : 264330593636

Option 4 ID : 264330593638

Status : Answered

Chosen Option : 2

Q.4 Read the given statements and conclusions carefully. You have to take the given statements to be true even if they seem to be at variance from commonly known facts. You have to decide which conclusion/s logically follow/s from the given statements.

Statements: All needles are pins. Some pins are wood. All wood are cups.

Conclusion I: Some needles are wood.

Conclusion II: All cups are pins.

- Ans
- 1. Neither conclusion (I) nor (II) is follow.
 - 2. Only conclusion (II) is follow.
 - 3. Both conclusions (I) and (II) are follow.
 - 4. Only conclusion (I) is follow.

Question ID : 264330155930

Option 1 ID : 264330611125

Option 2 ID : 264330611124

Option 3 ID : 264330611126

Option 4 ID : 264330611123

Status : Answered

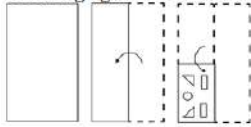
Chosen Option : 1

Q.5 In the following number-pairs, the second number is obtained by applying certain mathematical operations to the first number. Select the set in which the numbers are related in the same way as are the numbers of the following sets.
 (NOTE: Operations should be performed on the whole numbers, without breaking down the numbers into its constituent digits. E.g. 13 – Operations on 13 such as adding /deleting /multiplying etc. to 13 can be performed. Breaking down 13 into 1 and 3 and then performing mathematical operations on 1 and 3 is not allowed)
 11 : 60
 13 : 70

- Ans**
- 1. 19 : 90
 - 2. 15 : 80
 - 3. 17 : 85
 - 4. 21 : 100

Question ID : 264330154649
 Option 1 ID : 264330606062
 Option 2 ID : 264330606059
 Option 3 ID : 264330606060
 Option 4 ID : 264330606061
 Status : Answered
 Chosen Option : 2

Q.6 The sequence of folding a piece of paper and the manner in which the folded paper is cut is shown in the following figures. How would this paper look when unfolded?



- Ans**
- 1.
 - 2.
 - 3.
 - 4.

Question ID : 264330155612
 Option 1 ID : 264330609852
 Option 2 ID : 264330609851
 Option 3 ID : 264330609853
 Option 4 ID : 264330609854
 Status : Answered
 Chosen Option : 3

Q.7 In a certain code language, 'get more sleep' is coded as 'wo bt gk' and 'less is more' is coded as 'ap gk cm'. How is 'more' coded in the given language?

- Ans**
- 1. wo
 - 2. cm
 - 3. bt
 - 4. gk

Question ID : 264330151704
 Option 1 ID : 264330594446
 Option 2 ID : 264330594444
 Option 3 ID : 264330594443
 Option 4 ID : 264330594445
 Status : Answered
 Chosen Option : 4

Q.8 In a certain code language, 'PING' is coded as '62' and 'HAZE' is coded as '68'. What is the code for 'GOAT' in the given code language?

- Ans**
- 1. 67
 - 2. 65
 - 3. 66
 - 4. 69

Question ID : 264330155833
 Option 1 ID : 264330610736
 Option 2 ID : 264330610738
 Option 3 ID : 264330610737
 Option 4 ID : 264330610735
 Status : Answered
 Chosen Option : 4

Q.9 Read the given statements and conclusions carefully. You have to take the given statements to be true even if they seem to be at variance from commonly known facts. You have to decide which conclusion/s logically follow/s from the given statements.

Statements: All jars are plastic. Some plastic are spoons. No spoon is a fork.

Conclusion I: Some plastic are jars.

Conclusion II: Some forks are spoons.

- Ans**
- 1. Only conclusion (II) is follow.
 - 2. Neither conclusion (I) nor (II) is follow.
 - 3. Only conclusion (I) is follow.
 - 4. Both conclusions (I) and (II) are follow.

Question ID : 264330155899
 Option 1 ID : 264330611000
 Option 2 ID : 264330611001
 Option 3 ID : 264330610999
 Option 4 ID : 264330611002
 Status : Answered
 Chosen Option : 3

Q.10 What should come in place of '?' in the given series?

11 44 143 440 1331 ?

- Ans
- 1. 3996
 - 2. 4118
 - 3. 4266
 - 4. 4004

Question ID : 264330151476

Option 1 ID : 264330593531

Option 2 ID : 264330593533

Option 3 ID : 264330593534

Option 4 ID : 264330593532

Status : Answered

Chosen Option : 4

Q.11 If G means '-', A means '×', F means '+', B means '÷', then what will come in place of the question mark (?) in the following equation?

37 B 16 A 3 G 88 F 8 = ?

- Ans
- 1. 74
 - 2. 69
 - 3. 93
 - 4. 51

Question ID : 264330154685

Option 1 ID : 264330606205

Option 2 ID : 264330606204

Option 3 ID : 264330606206

Option 4 ID : 264330606203

Status : Answered

Chosen Option : 1

Q.12 KGTO is related to HDQL in a certain way based on the English alphabetical order. In the same way, YFSH is related to VCPE. To which of the following is GUMS related to, following the same logic?

- Ans
- 1. JXOU
 - 2. DSKP
 - 3. ESKU
 - 4. DRJP

Question ID : 264330151677

Option 1 ID : 264330594338

Option 2 ID : 264330594335

Option 3 ID : 264330594337

Option 4 ID : 264330594336

Status : Answered

Chosen Option : 4

Q.13 Select the combination of letters that when sequentially placed in the blanks of the given series, will complete the series.

_ KL _ K _ KK _ _ KL

- Ans**
- ✓ 1. KKLLK
 - ✗ 2. LLKLL
 - ✗ 3. KKKLL
 - ✗ 4. LKLLK

Question ID : 264330151636
 Option 1 ID : 264330594171
 Option 2 ID : 264330594174
 Option 3 ID : 264330594173
 Option 4 ID : 264330594172
 Status : Answered
 Chosen Option : 1

Q.14 What should come in place of '?' in the given series?

2 9 30 93 282 ?

- Ans**
- ✗ 1. 813
 - ✓ 2. 849
 - ✗ 3. 861
 - ✗ 4. 857

Question ID : 264330151465
 Option 1 ID : 264330593487
 Option 2 ID : 264330593488
 Option 3 ID : 264330593490
 Option 4 ID : 264330593489
 Status : Answered
 Chosen Option : 2

Q.15 N, O, P, Q, R, S, T and U are sitting around a square table facing the center of the table. Some of them are sitting at the corners while some are sitting at the exact center of the sides. N sits third to the left of U. U sits in any of the corners. O sits third to the right of T. T sits in one of the corners. Q is the immediate neighbour of P and U. P is not the neighbour of N. R is not T's neighbour.

How many people sit between P and R, when counted from the right of P?

- Ans**
- ✗ 1. Two
 - ✗ 2. Four
 - ✗ 3. One
 - ✓ 4. Three

Question ID : 264330155541
 Option 1 ID : 264330609568
 Option 2 ID : 264330609570
 Option 3 ID : 264330609567
 Option 4 ID : 264330609569
 Status : Answered
 Chosen Option : 3

Q.16 What will come in place of '?' in the following equation, if '+' and '-' are interchanged and '×' and '÷' are interchanged?

$$7 + 3 - 6 + 4 \times 4 = ?$$

- Ans**
- ✓ 1. 10
 - ✗ 2. 7
 - ✗ 3. 4
 - ✗ 4. 15

Question ID : 264330154668
 Option 1 ID : 264330606138
 Option 2 ID : 264330606135
 Option 3 ID : 264330606136
 Option 4 ID : 264330606137
 Status : Answered
 Chosen Option : 1

Q.17 Which figure should replace the question mark (?) if the following figure series were to be continued?

X	□	L	B	X	F	3	C	X	□	3	L	
	3			L			B			X		?
8	C	F	C	□	3	□	F	L	F	C	8	

Ans

- ✓ 1.

8	F	3
	□	
C	L	X
- ✗ 2.

3	L	F
	□	
C	8	X
- ✗ 3.

F	C	3
	□	
X	8	L
- ✗ 4.

8	L	3
	□	
C	F	X

Question ID : 264330154760
 Option 1 ID : 264330606505
 Option 2 ID : 264330606503
 Option 3 ID : 264330606506
 Option 4 ID : 264330606504
 Status : Answered
 Chosen Option : 1

Q.18 Select the set in which the numbers are related in the same way as are the numbers of the following sets.
 (NOTE: Operations should be performed on the whole numbers, without breaking down the numbers into its constituent digits. E.g. 13 – Operations on 13 such as adding / subtracting / multiplying etc. to 13 can be performed. Breaking down 13 into 1 and 3 and then performing mathematical operations on 1 and 3 is not allowed)
 (2, 14, 28)
 (7, 11, 77)

- Ans**
- 1. 4, 7, 23
 - 2. 6, 9, 54
 - 3. 1, 7, 45
 - 4. 8, 6, 98

Question ID : 264330151614
 Option 1 ID : 264330594083
 Option 2 ID : 264330594085
 Option 3 ID : 264330594084
 Option 4 ID : 264330594086
 Status : Answered
 Chosen Option : 2

Q.19 What should come in place of '?' in the given series?

10 41 165 661 2645 ?

- Ans**
- 1. 10597
 - 2. 10581
 - 3. 10604
 - 4. 10378

Question ID : 264330151480
 Option 1 ID : 264330593549
 Option 2 ID : 264330593548
 Option 3 ID : 264330593550
 Option 4 ID : 264330593547
 Status : Answered
 Chosen Option : 2

Q.20 If 5 October 2003 is a Sunday, then what will be the day of the week on 14 July 2010?

- Ans**
- 1. Friday
 - 2. Monday
 - 3. Wednesday
 - 4. Saturday

Question ID : 264330154356
 Option 1 ID : 264330604888
 Option 2 ID : 264330604889
 Option 3 ID : 264330604890
 Option 4 ID : 264330604887
 Status : Not Answered
 Chosen Option : --

Q.1 What does the term 'interest' refer to in banking?

- Ans** 1. The additional amount earned on a loan or deposit
 2. The amount of money deposited into a bank account
 3. The value of a currency in relation to other currencies
 4. The fee charged for withdrawing money from an ATM

Question ID : **264330157299**
Option 1 ID : **264330616561**
Option 2 ID : **264330616560**
Option 3 ID : **264330616562**
Option 4 ID : **264330616559**
Status : **Answered**
Chosen Option : **1**

Q.2 Bihu is a folk dance of which state?

- Ans** 1. Bihar
 2. Assam
 3. Chhattisgarh
 4. Arunachal Pradesh

Question ID : **264330159055**
Option 1 ID : **264330623579**
Option 2 ID : **264330623581**
Option 3 ID : **264330623582**
Option 4 ID : **264330623580**
Status : **Answered**
Chosen Option : **1**

Q.3 In which year did Lord Curzon announce the partition of Bengal during the British rule in India?

- Ans** 1. 1904
 2. 1906
 3. 1905
 4. 1907

Question ID : **264330161737**
Option 1 ID : **264330634275**
Option 2 ID : **264330634277**
Option 3 ID : **264330634276**
Option 4 ID : **264330634278**
Status : **Answered**
Chosen Option : **3**

Q.4 Which of the following statements are correct regarding the Power Sector's Revamped Distribution Sector Scheme?

- 1) The Prime Minister launched the Ministry of Power's flagship Revamped Distribution Sector Scheme in 2022.
- 2) This scheme is aimed at improving the operational efficiencies and financial sustainability of distribution companies.
- 3) From FY 2022-23 to FY 2027-28, the scheme aims to provide financial assistance to DISCOMs.
- 4) This scheme proposes to provide 25 crore Smart Prepaid meters to consumers all over the country.

- Ans
- 1. 1, 3 and 4
 - 2. 1, 2 and 4
 - 3. 2, 3 and 4
 - 4. 1, 2 and 3

Question ID : 264330161404
Option 1 ID : 264330632944
Option 2 ID : 264330632945
Option 3 ID : 264330632946
Option 4 ID : 264330632943
Status : Answered
Chosen Option : 2

Q.5 'Mein Kampf' is the autobiography of which world personality?

- Ans
- 1. Adolf Hitler
 - 2. Robert Mugabe
 - 3. Albert Einstein
 - 4. Charlie Chaplin

Question ID : 264330160966
Option 1 ID : 264330631196
Option 2 ID : 264330631198
Option 3 ID : 264330631197
Option 4 ID : 264330631195
Status : Answered
Chosen Option : 1

Q.6 What is the geographic location of the world's largest coral reef, known as the Great Barrier Reef?

- Ans
- 1. Switzerland
 - 2. Australia
 - 3. China
 - 4. Ireland

Question ID : 264330161313
Option 1 ID : 264330632580
Option 2 ID : 264330632581
Option 3 ID : 264330632582
Option 4 ID : 264330632579
Status : Answered
Chosen Option : 2

Q.7 To which Gharana did Gangubai Hangal primarily belong?

- Ans
- 1. Patiala
 - 2. Agra
 - 3. Banaras
 - 4. Kirana

Question ID : 264330155467

Option 1 ID : 264330609273

Option 2 ID : 264330609274

Option 3 ID : 264330609271

Option 4 ID : 264330609272

Status : **Not Attempted and Marked For Review**

Chosen Option : --

Q.8 Popular since ancient eras for the trading of livestock, _____, which is a month-long event, takes place on the auspicious occasion of Kartik Purnima in the month of November near Harihar Nath temple.

- Ans
- 1. Sonapur Mela
 - 2. Rajgir Mela
 - 3. Pushkar Mela
 - 4. Ardhkumbh Mela

Question ID : 264330160835

Option 1 ID : 264330630671

Option 2 ID : 264330630673

Option 3 ID : 264330630672

Option 4 ID : 264330630674

Status : **Answered**

Chosen Option : 1

Q.9 How many states were selected in Garib Kalyan Rojgar Abhiyaan (GKRA) 2020?

- Ans
- 1. 16 states
 - 2. 6 states
 - 3. 10 states
 - 4. 8 states

Question ID : 264330160170

Option 1 ID : 264330628022

Option 2 ID : 264330628019

Option 3 ID : 264330628021

Option 4 ID : 264330628020

Status : **Not Answered**

Chosen Option : --

Q.10 The celebrated folk artist Gulabo Sapera, recipient of Padma Shri Award in 2016, is an exponent of _____ dance.

- Ans**
- 1. Kalbeliya
 - 2. Tippani
 - 3. Bhavai
 - 4. Dandiya

Question ID : 264330155485
Option 1 ID : 264330609345
Option 2 ID : 264330609344
Option 3 ID : 264330609346
Option 4 ID : 264330609343
Status : Answered
Chosen Option : 4

Q.11 Which Indian musician was awarded the Grammy award for his Album 'Planet Drum'?

- Ans**
- 1. Zakir Hussain
 - 2. Sivamani
 - 3. Darshan Doshi
 - 4. Trilok Gurtu

Question ID : 264330155461
Option 1 ID : 264330609247
Option 2 ID : 264330609248
Option 3 ID : 264330609250
Option 4 ID : 264330609249
Status : Answered
Chosen Option : 1

Q.12 Which of the following is NOT a part of the six communication mail channels in India?

- Ans**
- 1. Metro channel
 - 2. Monthly channel
 - 3. Rajdhani channel
 - 4. Business channel

Question ID : 264330160144
Option 1 ID : 264330627918
Option 2 ID : 264330627916
Option 3 ID : 264330627915
Option 4 ID : 264330627917
Status : Answered
Chosen Option : 2

Q.13 Which of the following is an example of a non-debt capital receipt in the government budget?

- Ans 1. Sale of government-owned land
 2. Loans from international financial institutions
 3. Interest payment on government bonds
 4. Tax revenue collected from citizens

Question ID : 264330157279
Option 1 ID : 264330616480
Option 2 ID : 264330616479
Option 3 ID : 264330616482
Option 4 ID : 264330616481
Status : Answered
Chosen Option : 3

Q.14 Visva Bharati a famous educational institute was founded in 1921 by:

- Ans 1. Rabindranath Tagore
 2. Vinoba Bhave
 3. Mother Teresa
 4. Swami Chinmayananda

Question ID : 264330160885
Option 1 ID : 264330630874
Option 2 ID : 264330630872
Option 3 ID : 264330630873
Option 4 ID : 264330630871
Status : Answered
Chosen Option : 1

Q.15 How many women boxers from India won gold medals in the Women's World Boxing Championship 2023?

- Ans 1. 2
 2. 3
 3. 1
 4. 4

Question ID : 264330158225
Option 1 ID : 264330620260
Option 2 ID : 264330620261
Option 3 ID : 264330620259
Option 4 ID : 264330620262
Status : Answered
Chosen Option : 3

Q.16 Famous Bollywood actress Hema Malini is a trained _____ dancer.

- Ans 1. Kathak
 2. Bharatanatyam
 3. Odissi
 4. Kuchipudi

Question ID : 264330159066
Option 1 ID : 264330623626
Option 2 ID : 264330623625
Option 3 ID : 264330623624
Option 4 ID : 264330623623
Status : Answered
Chosen Option : 1

Q.17 Whose prior recommendation is required to introduce money bills in state legislature?

- Ans
- 1. Speaker of the House
 - 2. Chief Minister
 - 3. Governor
 - 4. Advocate General

Question ID : 264330159923
Option 1 ID : 264330627041
Option 2 ID : 264330627039
Option 3 ID : 264330627040
Option 4 ID : 264330627042
Status : Answered
Chosen Option : 3

Q.18 RK Narayan is the author of _____.

- Ans
- 1. The Guide
 - 2. Far From the Madding Crowd
 - 3. Godan
 - 4. Untouchable

Question ID : 264330160971
Option 1 ID : 264330631218
Option 2 ID : 264330631217
Option 3 ID : 264330631215
Option 4 ID : 264330631216
Status : Answered
Chosen Option : 2

Q.19 Where is the Qutub Minar situated?

- Ans
- 1. Delhi
 - 2. Agra
 - 3. Lucknow
 - 4. Chandigarh

Question ID : 264330160767
Option 1 ID : 264330630401
Option 2 ID : 264330630402
Option 3 ID : 264330630400
Option 4 ID : 264330630399
Status : Answered
Chosen Option : 1

Q.20 Which is the most obvious symptom of infantile jaundice that usually appears between the second and fourth day after birth?

- Ans
- 1. Cracking and irritation at the corners of mouth
 - 2. Swollen or puffy ankles
 - 3. Yellowing of the skin and the whites of the eyes
 - 4. Swelling and bleeding of the gums

Question ID : 264330161080
Option 1 ID : 264330631653
Option 2 ID : 264330631651
Option 3 ID : 264330631652
Option 4 ID : 264330631654
Status : Answered
Chosen Option : 3

Q.21 The Units of Linear momentum are measured in _____.

- Ans
- 1. $\text{kg}^2 \text{ m/s}$
 - 2. kg m/s^2
 - 3. $\text{k}^2\text{g m/s}$
 - 4. kg m/s

Question ID : 264330157779
Option 1 ID : 264330618476
Option 2 ID : 264330618477
Option 3 ID : 264330618478
Option 4 ID : 264330618475
Status : Answered
Chosen Option : 2

Q.22 In which of the following cities the 2023 SAFF Championship was held?

- Ans
- 1. Mumbai
 - 2. Bengaluru
 - 3. Kochi
 - 4. Ahmedabad

Question ID : 264330161149
Option 1 ID : 264330631927
Option 2 ID : 264330631929
Option 3 ID : 264330631928
Option 4 ID : 264330631930
Status : Answered
Chosen Option : 2

Q.23 Mirabai Chanu was selected as BBC Indian Sportswoman of the Year 2022. She is related to which sport?

- Ans
- 1. Discus throw
 - 2. Javelin throw
 - 3. Boxing
 - 4. Weightlifting

Question ID : 264330158367
Option 1 ID : 264330620830
Option 2 ID : 264330620829
Option 3 ID : 264330620827
Option 4 ID : 264330620828
Status : Answered
Chosen Option : 4

Q.24 Punjab state is rich in which natural resource from the following?

- Ans
- 1. Coal
 - 2. Petroleum
 - 3. Silicon
 - 4. Fertile soil

Question ID : 264330161493
Option 1 ID : 264330633301
Option 2 ID : 264330633299
Option 3 ID : 264330633302
Option 4 ID : 264330633300
Status : Answered
Chosen Option : 4

Q.25 How many schedules are there in our Constitution as of June 2023?

- Ans 1. 8
 2. 9
 3. 12
 4. 10

Question ID : 264330159895
Option 1 ID : 264330626927
Option 2 ID : 264330626930
Option 3 ID : 264330626929
Option 4 ID : 264330626928
Status : Answered
Chosen Option : 3

Section : English Language and Comprehension

Q.1 Select the most appropriate synonym of the given word.
Diminish

- Ans 1. Demote
 2. Relegate
 3. Prevent
 4. Weaken

Question ID : 264330151879
Option 1 ID : 264330595135
Option 2 ID : 264330595137
Option 3 ID : 264330595138
Option 4 ID : 264330595136
Status : Answered
Chosen Option : 1

Q.2 Select the option that can be used as a one-word substitute for the given group of words.

A person who loves or collects books

- Ans 1. Anglophile
 2. Heliophile
 3. Paedophile
 4. Bibliophile

Question ID : 264330151866
Option 1 ID : 264330595085
Option 2 ID : 264330595086
Option 3 ID : 264330595084
Option 4 ID : 264330595083
Status : Answered
Chosen Option : 4

Q.3 The following sentence has been divided into four parts. Identify the part that contains an error.

(A) We are living / (B) here since / (C) the summer / (D) of last year.

Ans 1. A

2. C

3. B

4. D

Question ID : 264330152627

Option 1 ID : 264330598114

Option 2 ID : 264330598111

Option 3 ID : 264330598112

Option 4 ID : 264330598113

Status : Answered

Chosen Option : 3

Q.4 Select the most appropriate option to fill in the blank.

Suresh has been learning Tamil _____ two months.

Ans 1. from

2. since

3. before

4. for

Question ID : 264330152732

Option 1 ID : 264330598527

Option 2 ID : 264330598528

Option 3 ID : 264330598530

Option 4 ID : 264330598529

Status : Answered

Chosen Option : 1

Q.5 Select the most appropriate meaning of the underlined idiom in the given sentence.

Rina's house is at a stone's throw from the school.

Ans 1. A very long distance

2. Next to

3. A very short distance

4. Not very close to

Question ID : 264330152877

Option 1 ID : 264330599099

Option 2 ID : 264330599101

Option 3 ID : 264330599100

Option 4 ID : 264330599102

Status : Answered

Chosen Option : 3

Q.6 Select the INCORRECTLY spelt word.

- Ans 1. Wrestler
 2. Accompaniment
 3. Debatable
 4. Discrepancy

Question ID : 264330152786
Option 1 ID : 264330598737
Option 2 ID : 264330598738
Option 3 ID : 264330598735
Option 4 ID : 264330598736
Status : Answered
Chosen Option : 2

Q.7 Select the most appropriate option to substitute the underlined segment in the given sentence.

Mohan unknowingly altered salt instead of sugar to the dessert making it taste terrible.

- Ans 1. added salt instead of sugar
 2. anguished salt instead of sugar
 3. amplified salt instead of sugar
 4. abridged salt instead of sugar

Question ID : 264330153435
Option 1 ID : 264330601266
Option 2 ID : 264330601264
Option 3 ID : 264330601263
Option 4 ID : 264330601265
Status : Answered
Chosen Option : 3

Q.8 Select the most appropriate meaning of the underlined idiom.

The actor decided to live life in the fast lane.

- Ans 1. Dropping charges of crime
 2. A life filled with excitement
 3. Racing away to the moon
 4. A life of extreme speed

Question ID : 264330153144
Option 1 ID : 264330600137
Option 2 ID : 264330600138
Option 3 ID : 264330600136
Option 4 ID : 264330600135
Status : Answered
Chosen Option : 4

Q.9 Parts of the following sentence have been given as options. Select the option that contains an error.
Sanjana rubbed her eyes hardly.

- Ans
- 1. Sanjana
 - 2. rubbed
 - 3. hardly
 - 4. her eyes

Question ID : 264330152807
Option 1 ID : 264330598819
Option 2 ID : 264330598820
Option 3 ID : 264330598822
Option 4 ID : 264330598821
Status : Answered
Chosen Option : 3

Q.10 Select the most appropriate idiom to fill in the blank.
I asked my friend to _____ against her employers who are doing wrong to her.

- Ans
- 1. fine words butter no parsnips
 - 2. finders keepers, losers weepers
 - 3. fight the good fight
 - 4. fight fire with fire

Question ID : 264330153297
Option 1 ID : 264330600746
Option 2 ID : 264330600744
Option 3 ID : 264330600743
Option 4 ID : 264330600745
Status : Answered
Chosen Option : 4

Q.11 Parts of the following sentence have been underlined and given as options. Select the option that contains a misspelt word.
The single most important factor that distinguishes those of us who succed in any venture and those of us who don't is this 'instant coffee' attitude.

- Ans
- 1. venture
 - 2. attitude
 - 3. distinguishes
 - 4. succed

Question ID : 264330151835
Option 1 ID : 264330594969
Option 2 ID : 264330594970
Option 3 ID : 264330594967
Option 4 ID : 264330594968
Status : Answered
Chosen Option : 4

Q.12 The following sentence has been divided into parts. One of them may contain an error. Select the part that contains the error from the given options. If you don't find any error, mark 'No error' as your answer.
A night alone / in a hotel / can be lonely prospect.

Ans ✓ 1. can be lonely prospect

✗ 2. A night alone

✗ 3. No error

✗ 4. in a hotel

Question ID : 264330153195

Option 1 ID : 264330600341

Option 2 ID : 264330600339

Option 3 ID : 264330600342

Option 4 ID : 264330600340

Status : Answered

Chosen Option : 1

Q.13 Parts of the given sentence have been underlined. One of them contains an error. The underlined parts are given as options with some changes. Select the option that correctly rectifies the error.

The new restaurant on Main Street is cheap than the old one.

Ans ✗ 1. the older one

✗ 2. in Main Street

✗ 3. newer restaurant

✓ 4. is cheaper than

Question ID : 264330153171

Option 1 ID : 264330600246

Option 2 ID : 264330600244

Option 3 ID : 264330600243

Option 4 ID : 264330600245

Status : Answered

Chosen Option : 4

Q.14 Parts of the following sentence have been underlined and given as options. Select the option that contains an error.

My relatives shall have reached Amritsar by now.

Ans ✗ 1. My

✗ 2. by now

✓ 3. shall

✗ 4. reached

Question ID : 264330153189

Option 1 ID : 264330600315

Option 2 ID : 264330600318

Option 3 ID : 264330600316

Option 4 ID : 264330600317

Status : Answered

Chosen Option : 3

Q.15 Select the option that can be used as a one-word substitute for the given group of words.

Group of bees

- Ans
- 1. Gaggle
 - 2. Shoal
 - 3. Swarm
 - 4. Pack

Question ID : 264330151814
Option 1 ID : 264330594883
Option 2 ID : 264330594884
Option 3 ID : 264330594885
Option 4 ID : 264330594886
Status : Answered
Chosen Option : 3

Q.16 Select the most appropriate ANTONYM of the given word.
Crude

- Ans
- 1. Patient
 - 2. Refined
 - 3. Primitive
 - 4. Observant

Question ID : 264330153365
Option 1 ID : 264330601013
Option 2 ID : 264330601011
Option 3 ID : 264330601012
Option 4 ID : 264330601014
Status : Answered
Chosen Option : 2

Q.17 Select the most appropriate option to fill in the blank.
Can you quote any _____ in your favour?

- Ans
- 1. answer
 - 2. summary
 - 3. lines
 - 4. precedent

Question ID : 264330153357
Option 1 ID : 264330600981
Option 2 ID : 264330600979
Option 3 ID : 264330600982
Option 4 ID : 264330600980
Status : Answered
Chosen Option : 1

Q.18 Select the INCORRECTLY spelt word.

- Ans 1. Insurance
 2. Assasin
 3. Mischievous
 4. Inexpressible

Question ID : 264330152691
Option 1 ID : 264330598368
Option 2 ID : 264330598369
Option 3 ID : 264330598367
Option 4 ID : 264330598370
Status : Answered
Chosen Option : 2

Q.19 Select the most appropriate meaning of the underlined segment in the given sentence.
Buying a new car can cost an arm and a leg.

- Ans 1. Be free
 2. Be affordable
 3. Be reasonable
 4. Be expensive

Question ID : 264330152926
Option 1 ID : 264330599284
Option 2 ID : 264330599285
Option 3 ID : 264330599286
Option 4 ID : 264330599283
Status : Answered
Chosen Option : 4

Q.20 Select the most appropriate synonym of the given word.
Insist

- Ans 1. Persist
 2. Resist
 3. Heist
 4. Assist

Question ID : 264330151824
Option 1 ID : 264330594926
Option 2 ID : 264330594924
Option 3 ID : 264330594923
Option 4 ID : 264330594925
Status : Answered
Chosen Option : 2

Comprehension:

In the following passage, some words have been deleted. Read the passage carefully and select the most appropriate option to fill in each blank.

There are several reasons why people might 1)_____ that homework is an unnecessary burden on children. Firstly, there is evidence to support the idea that homework 2)_____ nothing to improve educational outcomes. Countries such as Finland, where school children are not given homework, regularly top international educational league tables and outperform nations where setting homework is the norm. Secondly, many parents would agree that the school day is already 3)_____, and leaves their children too tired to do further study when they return home. 4)_____, it is recognised that play time is just as 5)_____ as study time from the perspective of brain development.

SubQuestion No : 21

Q.21 Select the most appropriate option to fill in blank 1.

Ans 1. be argues

2. have argue

3. argues

4. argue

Question ID : **264330153600**

Option 1 ID : **264330601886**

Option 2 ID : **264330601885**

Option 3 ID : **264330601884**

Option 4 ID : **264330601883**

Status : **Answered**

Chosen Option : **1**

Comprehension:

In the following passage, some words have been deleted. Read the passage carefully and select the most appropriate option to fill in each blank.

There are several reasons why people might 1)_____ that homework is an unnecessary burden on children. Firstly, there is evidence to support the idea that homework 2)_____ nothing to improve educational outcomes. Countries such as Finland, where school children are not given homework, regularly top international educational league tables and outperform nations where setting homework is the norm. Secondly, many parents would agree that the school day is already 3)_____, and leaves their children too tired to do further study when they return home. 4)_____, it is recognised that play time is just as 5)_____ as study time from the perspective of brain development.

SubQuestion No : 22

Q.22 Select the most appropriate option to fill in blank 2.

Ans 1. will does

2. has do

3. does

4. do

Question ID : **264330153601**

Option 1 ID : **264330601890**

Option 2 ID : **264330601887**

Option 3 ID : **264330601889**

Option 4 ID : **264330601888**

Status : **Answered**

Chosen Option : **4**

Comprehension:

In the following passage, some words have been deleted. Read the passage carefully and select the most appropriate option to fill in each blank.

There are several reasons why people might 1)_____ that homework is an unnecessary burden on children. Firstly, there is evidence to support the idea that homework 2)_____ nothing to improve educational outcomes. Countries such as Finland, where school children are not given homework, regularly top international educational league tables and outperform nations where setting homework is the norm. Secondly, many parents would agree that the school day is already 3)_____, and leaves their children too tired to do further study when they return home. 4)_____, it is recognised that play time is just as 5)_____ as study time from the perspective of brain development.

SubQuestion No : 23

Q.23 Select the most appropriate option to fill in blank 3.

Ans ✓ 1. long enough

✗ 2. big enough

✗ 3. not enough

✗ 4. enough of

Question ID : 264330153602

Option 1 ID : 264330601892

Option 2 ID : 264330601891

Option 3 ID : 264330601894

Option 4 ID : 264330601893

Status : Answered

Chosen Option : 1

Comprehension:

In the following passage, some words have been deleted. Read the passage carefully and select the most appropriate option to fill in each blank.

There are several reasons why people might 1)_____ that homework is an unnecessary burden on children. Firstly, there is evidence to support the idea that homework 2)_____ nothing to improve educational outcomes. Countries such as Finland, where school children are not given homework, regularly top international educational league tables and outperform nations where setting homework is the norm. Secondly, many parents would agree that the school day is already 3)_____, and leaves their children too tired to do further study when they return home. 4)_____, it is recognised that play time is just as 5)_____ as study time from the perspective of brain development.

SubQuestion No : 24

Q.24 Select the most appropriate option to fill in blank 4.

Ans ✗ 1. Similarly

✗ 2. Normally

✓ 3. Finally

✗ 4. Usually

Question ID : 264330153603

Option 1 ID : 264330601897

Option 2 ID : 264330601895

Option 3 ID : 264330601898

Option 4 ID : 264330601896

Status : Answered

Chosen Option : 4

Comprehension:

In the following passage, some words have been deleted. Read the passage carefully and select the most appropriate option to fill in each blank.

There are several reasons why people might 1)_____ that homework is an unnecessary burden on children. Firstly, there is evidence to support the idea that homework 2)_____ nothing to improve educational outcomes. Countries such as Finland, where school children are not given homework, regularly top international educational league tables and outperform nations where setting homework is the norm. Secondly, many parents would agree that the school day is already 3)_____, and leaves their children too tired to do further study when they return home. 4)_____, it is recognised that play time is just as 5)_____ as study time from the perspective of brain development.

SubQuestion No : 25

Q.25 Select the most appropriate option to fill in blank 5.

- Ans 1. soon
 2. beneficial
 3. bad
 4. confidential

Question ID : **264330153604**

Option 1 ID : **264330601899**

Option 2 ID : **264330601900**

Option 3 ID : **264330601902**

Option 4 ID : **264330601901**

Status : **Answered**

Chosen Option : **2**

SSC MTS 2023 Tier 1 Sept 5 Shift 2 Question Paper with Answers

Roll Number	
Candidate Name	
Exam Date	05/09/2023
Exam Time	12:30 PM - 2:30 PM
Subject	MTS Non Tech Havaldar CBIC and CBN Examination 2023

Section : Numerical and Mathematical Ability

Q.1 A right circular cone is 9.8 cm high with the radius of its base 4 cm. It is melted and recast into a right circular cone with the radius of its base 3.5 cm. Find its height (use $\pi = \frac{22}{7}$).

- Ans**
- 1. 21.8 cm
 - 2. 28.1 cm
 - 3. 12.8 cm
 - 4. 18.2 cm

Question ID : 264330156293

Option 1 ID : 264330612574

Option 2 ID : 264330612573

Option 3 ID : 264330612572

Option 4 ID : 264330612571

Status : Answered

Chosen Option : 3

Q.2 Profit of ₹29,120 is divided among A, B and C so that A's share is $2\frac{1}{2}$ times B's and B's share is $1\frac{1}{5}$ times C. Find B's share.

- Ans**
- 1. ₹6,940
 - 2. ₹7,820
 - 3. ₹6,720
 - 4. ₹7,140

Question ID : 264330156268

Option 1 ID : 264330612472

Option 2 ID : 264330612474

Option 3 ID : 264330612471

Option 4 ID : 264330612473

Status : Answered

Chosen Option : 3

Q.3 Tushar, Megha, Punam and Richa can complete a piece of work in 10 days, 12 days, 15 days and 18 days, respectively. In how many days will the work be completed if each of them work on alternate days starting with Megha on first day, Punam on second day, Richa on third day, Tushar on fourth day and then again Megha on fifth day and so on.

- Ans**
- 1. 12
 - 2. 13
 - 3. 10
 - 4. 14

Question ID : 264330156195
 Option 1 ID : 264330612180
 Option 2 ID : 264330612182
 Option 3 ID : 264330612179
 Option 4 ID : 264330612181
 Status : Answered
 Chosen Option : 2

Q.4 The table below represents marks obtained by four students A, B, C, and D in four subjects in an examination. The maximum marks for each subject are 100.

Student	English	Hindi	Math	Science
A	90	89	100	93
B	85	86	88	95
C	94	92	96	89
D	87	90	97	82

The average marks of Math and Hindi taken together of the four students is what per cent more/less (rounded off to 1 decimal place) than the average marks of English and Science taken together?

- Ans**
- 1. More, 3.2%
 - 2. More, 2.4%
 - 3. Less, 2.4%
 - 4. Less, 3.2%

Question ID : 264330153779
 Option 1 ID : 264330602579
 Option 2 ID : 264330602581
 Option 3 ID : 264330602582
 Option 4 ID : 264330602580
 Status : Answered
 Chosen Option : 1

Q.5 The average age of a family of three members (mother, father and Son) is 44 years. After the son's marriage, the average age of the family becomes 39 years. What is the age of the daughter-in-law?

- Ans**
- 1. 24 years
 - 2. 25 years
 - 3. 23 years
 - 4. 22 years

Question ID : 264330154116
 Option 1 ID : 264330603928
 Option 2 ID : 264330603927
 Option 3 ID : 264330603929
 Option 4 ID : 264330603930
 Status : Answered
 Chosen Option : 1

Q.6 Using the middle points of sides of a square with an area of 36 square units, another square is made. What is the area of a new square made in square units?

- Ans**
- 1. 24
 - 2. 27
 - 3. 18
 - 4. 21

Question ID : 264330153824
Option 1 ID : 264330602761
Option 2 ID : 264330602760
Option 3 ID : 264330602759
Option 4 ID : 264330602762
Status : Answered
Chosen Option : 3

Q.7 Find the amount of ₹75,000 for one year at the rate of 16% per annum, if the interest is compounded quarterly. (rounded off to two decimal places)

- Ans**
- 1. ₹87,379.40
 - 2. ₹89,773.40
 - 3. ₹87,937.40
 - 4. ₹87,739.40

Question ID : 264330156364
Option 1 ID : 264330612857
Option 2 ID : 264330612858
Option 3 ID : 264330612856
Option 4 ID : 264330612855
Status : Answered
Chosen Option : 4

Q.8 How much simple interest will ₹6,000 earn in 15 months at the rate of 12% per annum?

- Ans**
- 1. ₹900
 - 2. ₹600
 - 3. ₹750
 - 4. ₹800

Question ID : 264330155965
Option 1 ID : 264330611262
Option 2 ID : 264330611260
Option 3 ID : 264330611259
Option 4 ID : 264330611261
Status : Answered
Chosen Option : 1

Q.9 Nikita made two investments; she earns 10% on one investment and lost 20% on the second investment. If the investments were in the ratio 2 : 3, then she got a:

- Ans**
- 1. loss of 8%
 - 2. profit of 15%
 - 3. profit of 8%
 - 4. loss of 15%

Question ID : 264330154046
 Option 1 ID : 264330603650
 Option 2 ID : 264330603647
 Option 3 ID : 264330603649
 Option 4 ID : 264330603648
 Status : Answered
 Chosen Option : 1

Q.10 Simplify the given expression.

$$2 \div [2 + 2 \div \{2 + 2 \div (2 + 2 \div 3)\}]$$

- Ans**
- 1. $\frac{11}{15}$
 - 2. $\frac{19}{15}$
 - 3. $\frac{17}{15}$
 - 4. $\frac{13}{15}$

Question ID : 264330156068
 Option 1 ID : 264330611673
 Option 2 ID : 264330611674
 Option 3 ID : 264330611672
 Option 4 ID : 264330611671
 Status : Answered
 Chosen Option : 1

Q.11 Reena, Ritu and Sita can independently complete a piece of work in 6 hours, 9 hours and 18 hours, respectively. If they work together, then how much time (in hours) will they take to complete that piece of work?

- Ans**
- 1. 3
 - 2. 5
 - 3. 4
 - 4. 2

Question ID : 264330156237
 Option 1 ID : 264330612348
 Option 2 ID : 264330612350
 Option 3 ID : 264330612349
 Option 4 ID : 264330612347
 Status : Answered
 Chosen Option : 1

Q.12 The mean proportion of a and $\frac{a}{b^2}$ is _____.

- Ans
- 1. ab
 - 2. $\frac{b}{a}$
 - 3. $\frac{a}{b}$
 - 4. $\frac{a}{2b}$

Question ID : 264330153808

Option 1 ID : 264330602698

Option 2 ID : 264330602697

Option 3 ID : 264330602695

Option 4 ID : 264330602696

Status : Answered

Chosen Option : 3

Q.13 A school has two sections of a class. Section A has 30 students and Section B has 20 students. The average score of the students in Section A is 85, and the average score of the students in Section B is 70. What is the overall average score of the class?

- Ans
- 1. 81
 - 2. 80
 - 3. 79
 - 4. 78

Question ID : 264330156254

Option 1 ID : 264330612415

Option 2 ID : 264330612416

Option 3 ID : 264330612417

Option 4 ID : 264330612418

Status : Answered

Chosen Option : 3

Q.14 The HCF of three numbers is 57. If they are in the ratio of 4 : 5 : 6, then find the numbers.

- Ans
- 1. 228, 285, 342
 - 2. 236, 295, 354
 - 3. 240, 300, 360
 - 4. 232, 290, 348

Question ID : 264330155722

Option 1 ID : 264330610293

Option 2 ID : 264330610291

Option 3 ID : 264330610294

Option 4 ID : 264330610292

Status : Answered

Chosen Option : 1

Q.15 The strength of a school increases and decreases every alternate year by 20%. It started with an increase in the year 2015 and the initial strength was 3000. Find the strength of the school in the year 2017 and also the percentage of increase in strength, respectively.

- Ans**
- ✓ 1. 3456, 15.2%
 - ✗ 2. 4456, 14.2%
 - ✗ 3. 4556, 17.2%
 - ✗ 4. 3556, 16.2%

Question ID : 264330155996

Option 1 ID : 264330611385

Option 2 ID : 264330611383

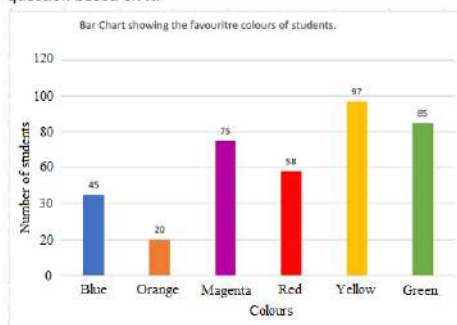
Option 3 ID : 264330611386

Option 4 ID : 264330611384

Status : Answered

Chosen Option : 1

Q.16 The Bar Chart below shows the favourite colours of 380 students in a class. Study the bar chart and answer the question based on it.



The total number of students whose favourite colours are blue, magenta, red and yellow is what per cent (rounded off to the nearest integer) of the total number of students in the class?

- Ans**
- ✗ 1. 77%
 - ✗ 2. 69%
 - ✗ 3. 64%
 - ✓ 4. 72%

Question ID : 264330153782

Option 1 ID : 264330602593

Option 2 ID : 264330602592

Option 3 ID : 264330602591

Option 4 ID : 264330602594

Status : Answered

Chosen Option : 4

Q.17 The total journey is of 800 km. A car travels the first 320 km of the journey at the speed of 64 km/hr. What should be the speed of the next 480 km so that average speed will become 80 km/hr?

- Ans**
- ✓ 1. 96 km/hr
 - ✗ 2. 69 km/hr
 - ✗ 3. 86 km/hr
 - ✗ 4. 89 km/hr

Question ID : 264330156550

Option 1 ID : 264330613590

Option 2 ID : 264330613587

Option 3 ID : 264330613588

Option 4 ID : 264330613589

Status : Answered

Chosen Option : 1

Q.18 एक आदमी साइकिल से एक स्थान तक जाने और वहां से स्कूटर से वापस आने में 8 घंटे 30 मिनट का समय लेता है। यदि वह दोनों ओर की यात्रा साइकिल से करता है, तो उसे 10 घंटे लगते हैं। उसे स्कूटर से दोनों ओर की यात्रा करने में कितना समय लगेगा (घंटों में)?

- Ans**
- 1. $4\frac{1}{2}$
 - 2. 7
 - 3. $3\frac{1}{2}$
 - 4. 4

Question ID : 264330156007

Option 1 ID : 264330611427

Option 2 ID : 264330611430

Option 3 ID : 264330611428

Option 4 ID : 264330611429

Status : Answered

Chosen Option : 3

Q.19 Divya bought six candies for a rupee. How many candies for a rupee must she sell to gain 50%?

- Ans**
- 1. Four
 - 2. Three
 - 3. One
 - 4. Two

Question ID : 264330155704

Option 1 ID : 264330610222

Option 2 ID : 264330610221

Option 3 ID : 264330610219

Option 4 ID : 264330610220

Status : Answered

Chosen Option : 2

Q.20 एक सिपाही एक चोर को 185 m की दूरी से देखता है। चोर भागने लगता है और सिपाही उसका पीछा करता है। चोर और सिपाही क्रमशः 8 m/s और 9 m/s की चाल से दौड़ते हैं। 2 मिनट बाद उनके बीच की दूरी कितनी है?

- Ans**
- 1. 65 m
 - 2. 92 m
 - 3. 120 m
 - 4. 130 m

Question ID : 264330153882

Option 1 ID : 264330602991

Option 2 ID : 264330602993

Option 3 ID : 264330602992

Option 4 ID : 264330602994

Status : Answered

Chosen Option : 3


Q.1 What should come in place of ? in the given series based on the English alphabetical order?

SDJ, UGL, WJN, YMP, ?

- Ans
- 1. CPS
 - 2. BQS
 - 3. APR
 - 4. BOR

Question ID : 264330155779
 Option 1 ID : 264330610522
 Option 2 ID : 264330610520
 Option 3 ID : 264330610519
 Option 4 ID : 264330610521
 Status : Answered
 Chosen Option : 3

Q.2 Identify the figure that completes the pattern (rotation is NOT allowed).



Ans

- 1.
- 2.
- 3.
- 4.

Question ID : 264330154518
 Option 1 ID : 264330605537
 Option 2 ID : 264330605538
 Option 3 ID : 264330605536
 Option 4 ID : 264330605535
 Status : Answered
 Chosen Option : 1

Q.3 JR 11 is related to KT 16 in a certain way. In the same way, VM 22 is related to WO 27. To which of the following is DS 18 related to following the same logic?

- Ans**
- 1. CQ 24
 - 2. EU 23
 - 3. FU 23
 - 4. FT 22

Question ID : 264330151678
Option 1 ID : 264330594342
Option 2 ID : 264330594340
Option 3 ID : 264330594339
Option 4 ID : 264330594341
Status : Answered
Chosen Option : 3

Q.4 Read the given statements and conclusions carefully. You have to take the given statements to be true even if they seem to be at variance from commonly known facts. You have to decide which conclusion/s logically follow/s from the given statements.

Statements: Some walls are stone. All stones are diamonds. All diamonds are bricks.

Conclusion I: Some stones are walls.

Conclusion II: Some stones are bricks.

- Ans**
- 1. Neither conclusion (I) nor (II) is follow.
 - 2. Both conclusions (I) and (II) are follow.
 - 3. Only conclusion (II) is follow.
 - 4. Only conclusion (I) is follow.

Question ID : 264330155932
Option 1 ID : 264330611133
Option 2 ID : 264330611134
Option 3 ID : 264330611132
Option 4 ID : 264330611131
Status : Answered
Chosen Option : 4

Q.5 Manu, Ram, Gaurav, Shivam, Umesh and Veer are sitting around a circular table facing the centre. Manu is sitting 2nd to the left of Ram. Gaurav is sitting 3rd to the right of Ram. Shivam is sitting 3rd to the left of Manu. Umesh is sitting 2nd to the left of Shivam. Who is sitting 2nd to the left of Manu?

- Ans**
- 1. Gaurav
 - 2. Ram
 - 3. Veer
 - 4. Umesh

Question ID : 264330155647
Option 1 ID : 264330609991
Option 2 ID : 264330609994
Option 3 ID : 264330609992
Option 4 ID : 264330609993
Status : Not Answered
Chosen Option : --

Q.6 What should come in place of ? in the given series?

31 32 35 36 39 ?

- Ans
- 1. 41
 - 2. 42
 - 3. 43
 - 4. 40

Question ID : 264330151547
Option 1 ID : 264330593816
Option 2 ID : 264330593817
Option 3 ID : 264330593818
Option 4 ID : 264330593815
Status : Answered
Chosen Option : 4

Q.7 What should come in place of '?' in the given series?

7 30 122 490 1962 ?

- Ans
- 1. 7760
 - 2. 7850
 - 3. 7872
 - 4. 7896

Question ID : 264330151494
Option 1 ID : 264330593603
Option 2 ID : 264330593604
Option 3 ID : 264330593605
Option 4 ID : 264330593606
Status : Answered
Chosen Option : 2

Q.8 What should come in place of ? in the given series based on the English alphabetical order?

FVZ, GXA, HZB, IBC, ?

- Ans
- 1. IED
 - 2. JDD
 - 3. IEF
 - 4. KDF

Question ID : 264330155767
Option 1 ID : 264330610472
Option 2 ID : 264330610471
Option 3 ID : 264330610473
Option 4 ID : 264330610474
Status : Answered
Chosen Option : 2

Q.9 In a certain code language, 'ETHOS' is coded as '15' and 'CHEERFUL' is coded as '24'. What is the code for 'CHIMNEY' in the given code language?

- Ans**
- 1. 18
 - 2. 21
 - 3. 19
 - 4. 23

Question ID : 264330155821

Option 1 ID : 264330610690

Option 2 ID : 264330610689

Option 3 ID : 264330610688

Option 4 ID : 264330610687

Status : Answered

Chosen Option : 2

Q.10 Select the correct mirror image of the given figure when the mirror is placed at MN as shown below.



- Ans**
- 1. 7 q B w P e 3
 - 2. 3 e P w B 7
 - 3. 3 e P w B 7
 - 4. 7 d B w P e 3

Question ID : 264330151519

Option 1 ID : 264330593704

Option 2 ID : 264330593703

Option 3 ID : 264330593705

Option 4 ID : 264330593706

Status : Answered

Chosen Option : 3

Q.11 यदि '+' और '-' को आपस में बदल दिया जाए तथा 'x' और '÷' को आपस में बदल दिया जाए तो निम्नलिखित समीकरण में (?) के स्थान पर क्या आएगा?

$$52 \div 6 + 71 - 168 \times 8 = ?$$

- Ans**
- 1. 310
 - 2. 313
 - 3. 262
 - 4. 211

Question ID : 264330154619

Option 1 ID : 264330605939

Option 2 ID : 264330605942

Option 3 ID : 264330605941

Option 4 ID : 264330605940

Status : Answered

Chosen Option : 3

Q.12 In the following number-pairs, the second number is obtained by applying certain mathematical operations to the first number. Select the set in which the numbers are related in the same way as are the numbers of the following sets.
 (NOTE : Operations should be performed on the whole numbers, without breaking down the numbers into its constituent digits. E.g. 13 – Operations on 13 such as adding /deleting /multiplying etc. to 13 can be performed. Breaking down 13 into 1 and 3 and then performing mathematical operations on 1 and 3 is not allowed)
 12 : 144
 13 : 169

- Ans**
- 1. 9 : 80
 - 2. 10 : 90
 - 3. 15 : 225
 - 4. 14 : 182

Question ID : 264330154647

Option 1 ID : 264330606054

Option 2 ID : 264330606051

Option 3 ID : 264330606053

Option 4 ID : 264330606052

Status : Answered

Chosen Option : 3

Q.13 Which figure should replace the question mark (?) if the following figure series were to be continued?

B R A I D	R B D A I	I A S B R	A I R S B	?
-----------	-----------	-----------	-----------	---

Ans

1. I R T S A

2. B S T I A

3. B A I R S

4. S B T A I

Question ID : 264330154767

Option 1 ID : 264330606534

Option 2 ID : 264330606531

Option 3 ID : 264330606532

Option 4 ID : 264330606533

Status : Answered

Chosen Option : 3

Q.14 What should come in place of '?' in the given series?

16 31 76 ? 616 1831 5476

- Ans
- 1. 217
 - 2. 201
 - 3. 207
 - 4. 211

Question ID : 264330151446
 Option 1 ID : 264330593414
 Option 2 ID : 264330593411
 Option 3 ID : 264330593412
 Option 4 ID : 264330593413
 Status : Answered
 Chosen Option : 1

Q.15 In a certain code language, 'make your life' is coded as 'uk ox zt' and 'life is good' is coded as 'qr uk va'. How is 'life' coded in the given language?

- Ans
- 1. zt
 - 2. ox
 - 3. uk
 - 4. qr

Question ID : 264330151692
 Option 1 ID : 264330594395
 Option 2 ID : 264330594398
 Option 3 ID : 264330594397
 Option 4 ID : 264330594396
 Status : Answered
 Chosen Option : 3

Q.16 Select the combination of letters that when sequentially placed in the blanks of the given series will make it logically complete.

F_HTFKO_ _RVTFY_TF_JT

- Ans
- 1. UJHNH
 - 2. DHJNF
 - 3. JFJMH
 - 4. DTFCF

Question ID : 264330156320
 Option 1 ID : 264330612682
 Option 2 ID : 264330612681
 Option 3 ID : 264330612679
 Option 4 ID : 264330612680
 Status : Answered
 Chosen Option : 4

Q.17 If G means '-', C means 'x', D means '+', E means '+', then what will come in place of the question mark (?) in the following equation?

$$64 D 4 G 37 E 12 C 7 = ?$$

- Ans**
- 1. 71
 - 2. 63
 - 3. 36
 - 4. 89

Question ID : **264330154691**
Option 1 ID : **264330606229**
Option 2 ID : **264330606228**
Option 3 ID : **264330606227**
Option 4 ID : **264330606230**
Status : **Answered**
Chosen Option : **2**

Q.18 5 is related to 19 following a certain logic. Following the same logic, 8 is related to 31. To which of the following is 13 related to, following the same logic?

- Ans**
- 1. 51
 - 2. 52
 - 3. 53
 - 4. 50

Question ID : **264330151605**
Option 1 ID : **264330594048**
Option 2 ID : **264330594049**
Option 3 ID : **264330594050**
Option 4 ID : **264330594047**
Status : **Answered**
Chosen Option : **1**

Q.19 If 3 May 2010 is a Monday, then what will be the day of the week on 16 December 2014?

- Ans**
- 1. Tuesday
 - 2. Saturday
 - 3. Friday
 - 4. Sunday

Question ID : **264330154352**
Option 1 ID : **264330604874**
Option 2 ID : **264330604871**
Option 3 ID : **264330604872**
Option 4 ID : **264330604873**
Status : **Answered**
Chosen Option : **3**

Q.20 Read the given statement(s) and conclusions carefully. Assuming that the information given in the statements is true, even if it appears to be at variance with commonly known facts, decide which of the given conclusions logically follow(s) from the statement(s).

Statements: All orchids are flowers. Some orchids are beautiful.

Conclusions:

(I) Some flowers are beautiful.

(II) All beautiful are flowers.

- Ans**
- 1. Only conclusion (II) is follows.
 - 2. Both conclusions (I) and (II) are follows.
 - 3. Neither conclusion (I) nor (II) is follows.
 - 4. Only conclusion (I) is follows.

Question ID : 264330154434

Option 1 ID : 264330605200

Option 2 ID : 264330605202

Option 3 ID : 264330605201

Option 4 ID : 264330605199

Status : Answered

Chosen Option : 4

Section : General Awareness

Q.1 दूध, समुद्री भोजन, मेवे और साबुत अनाज में कौन-सा खनिज उच्च मात्रा में होता है जो हड्डियों के स्वास्थ्य और हमारे शरीर की मरम्मत प्रक्रिया में सहायता करता है?

- Ans**
- 1. फ्लोराइड
 - 2. पोटेशियम
 - 3. फॉस्फोरस
 - 4. जिंक

Question ID : 264330161074

Option 1 ID : 264330631630

Option 2 ID : 264330631629

Option 3 ID : 264330631628

Option 4 ID : 264330631627

Status : Answered

Chosen Option : 2

Q.2 पूंजीगत व्यय क्या है?

- Ans**
- 1. हेल्थकेयर कार्यक्रमों पर व्यय की गई धनराशि
 - 2. ऋण चुकाने पर व्यय की गई धनराशि
 - 3. किसानों के लिए सब्सिडी पर व्यय की गई धनराशि
 - 4. अवसंरचना (infrastructure) के विकास पर व्यय की गई धनराशि

Question ID : 264330157274

Option 1 ID : 264330616460

Option 2 ID : 264330616459

Option 3 ID : 264330616462

Option 4 ID : 264330616461

Status : Answered

Chosen Option : 4

Q.3 Which physiographic division of India from the following is formed of alluvial soil?

- Ans
- 1. The Peninsular Plateau
 - 2. The Himalayan Mountains
 - 3. The Islands
 - 4. The Northern Plains

Question ID : 264330161531
Option 1 ID : 264330633452
Option 2 ID : 264330633454
Option 3 ID : 264330633453
Option 4 ID : 264330633451
Status : Answered
Chosen Option : 2

Q.4 ऑस्कर पुरस्कार (2023) विजेता गीत 'नाटू नाटू' के संगीत निर्देशक कौन हैं?

- Ans
- 1. उत्तम सिंह
 - 2. ए.आर. रहमान
 - 3. एम.एम. कीरावनी
 - 4. अनु मलिक

Question ID : 264330155504
Option 1 ID : 264330609419
Option 2 ID : 264330609421
Option 3 ID : 264330609422
Option 4 ID : 264330609420
Status : Answered
Chosen Option : 3

Q.5 Laterite soil develops as a result of which of the following reasons?

- Ans
- 1. Compaction
 - 2. Leaching
 - 3. High temperature only
 - 4. Sedimentation

Question ID : 264330161315
Option 1 ID : 264330632589
Option 2 ID : 264330632588
Option 3 ID : 264330632590
Option 4 ID : 264330632587
Status : Answered
Chosen Option : 2

Q.6 भीतरगांव ईंट मंदिर (Bhitargaon Brick temple) निम्नलिखित में से किस काल की वास्तुकला का एक अच्छा उदाहरण है?

- Ans
- 1. मुगल काल
 - 2. गुप्त काल
 - 3. मौर्य काल
 - 4. चोल काल

Question ID : 264330160782
Option 1 ID : 264330630461
Option 2 ID : 264330630460
Option 3 ID : 264330630459
Option 4 ID : 264330630462
Status : Answered
Chosen Option : 2

Q.7 खेलो इंडिया यूनिवर्सिटी गोम्स के तीसरे संस्करण के शुभंकर का नाम क्या है?

- Ans
- 1. शेरा (Shera)
 - 2. सावज (Savaj)
 - 3. जीतू (Jitu)
 - 4. मोगा (Moga)

Question ID : 264330161133
Option 1 ID : 264330631864
Option 2 ID : 264330631866
Option 3 ID : 264330631863
Option 4 ID : 264330631865
Status : Answered
Chosen Option : 3

Q.8 ऑटोबायोग्राफी ऑफ ए योगी (Autobiography of a Yogi)' _____ की आत्मकथा है।

- Ans
- 1. स्वामी दयानंद सरस्वती
 - 2. परमहंस योगानंद
 - 3. रामकृष्ण परमहंस
 - 4. स्वामी विवेकानंद

Question ID : 264330160961
Option 1 ID : 264330631176
Option 2 ID : 264330631177
Option 3 ID : 264330631178
Option 4 ID : 264330631175
Status : Answered
Chosen Option : 2

Q.9 झारखंड का पाइका नृत्य (Paika dance) आमतौर पर _____ जनजाति द्वारा विशेष सम्मानित अतिथियों के स्वागत के लिए या धार्मिक जुलूस (शोभा यात्रा) के दौरान किया जाता है।

- Ans
- 1. संथाल (Santhal)
 - 2. मुंडा (Munda)
 - 3. ओरांव (Oraon)
 - 4. भूमिज (Bhumij)

Question ID : 264330160799
Option 1 ID : 264330630527
Option 2 ID : 264330630529
Option 3 ID : 264330630530
Option 4 ID : 264330630528
Status : Answered
Chosen Option : 1

Q.10 'My Country My Life' is an autobiography of _____.

- Ans
- 1. Jaswant Singh
 - 2. Amit Shah
 - 3. LK Advani
 - 4. Rajnath Singh

Question ID : 264330155492
Option 1 ID : 264330609373
Option 2 ID : 264330609371
Option 3 ID : 264330609374
Option 4 ID : 264330609372
Status : Answered
Chosen Option : 1

Q.11 As per the Census of India 2011, which state recorded a negative population growth rate?

- Ans
- 1. Sikkim
 - 2. Kerala
 - 3. Arunachal Pradesh
 - 4. Nagaland

Question ID : 264330161552
Option 1 ID : 264330633537
Option 2 ID : 264330633535
Option 3 ID : 264330633536
Option 4 ID : 264330633538
Status : Answered
Chosen Option : 4

Q.12 In March 2023, Rajasthan became the first state in India to provide right to ___ for its people.

- Ans
- 1. accommodation
 - 2. education
 - 3. telecommunication
 - 4. health

Question ID : 264330158335
Option 1 ID : 264330620700
Option 2 ID : 264330620699
Option 3 ID : 264330620702
Option 4 ID : 264330620701
Status : Answered
Chosen Option : 3

Q.13 सुभाष चंद्र बोस के राजनीतिक गुरु कौन थे?

- Ans
- 1. एम. जी. रानाडे
 - 2. महात्मा गांधी
 - 3. जवाहर लाल नेहरू
 - 4. चितरंजन दास

Question ID : 264330162344
Option 1 ID : 264330636705
Option 2 ID : 264330636703
Option 3 ID : 264330636704
Option 4 ID : 264330636706
Status : Answered
Chosen Option : 4

Q.14 शास्त्रीय नृत्य के राष्ट्रीय पुरस्कार को _____ कहा जाता है।

- Ans
- 1. जातीय नृत्य सम्मान
 - 2. भारतीय पुरस्कार
 - 3. अभिनंदन सरोजा पुरस्कार
 - 4. शास्त्रीय सम्मान

Question ID : 264330160983
Option 1 ID : 264330631264
Option 2 ID : 264330631266
Option 3 ID : 264330631265
Option 4 ID : 264330631263
Status : Answered
Chosen Option : 3

Q.15 Which state has the maximum number of Jute mills (as of 2022)?

- Ans
- 1. Tripura
 - 2. Uttar Pradesh
 - 3. Assam
 - 4. West Bengal

Question ID : 264330161491
Option 1 ID : 264330633294
Option 2 ID : 264330633291
Option 3 ID : 264330633293
Option 4 ID : 264330633292
Status : Answered
Chosen Option : 4

Q.16 अर्थव्यवस्था में व्यावसायिक बैंकों (commercial banks) की मुख्य भूमिका क्या है?

- Ans
- 1. आर्थिक वृद्धि और विकास को बढ़ावा देना
 - 2. शेयर बाज़ार को विनियमित करना
 - 3. महंगाई पर नियंत्रण
 - 4. विदेशी मुद्रा भंडार का प्रबंधन

Question ID : 264330157307
Option 1 ID : 264330616593
Option 2 ID : 264330616592
Option 3 ID : 264330616591
Option 4 ID : 264330616594
Status : Answered
Chosen Option : 1

Q.17 गौर मारिया (Gaur Maria), _____ राज्य की एक नृत्य शैली, आनंद और आह्वान का एक प्रसिद्ध कला शैली है। यह एक समूह नृत्य है और इस नृत्य में पुरुष और महिलाएं दोनों उत्साहपूर्वक भाग लेते हैं।

- Ans
- 1. महाराष्ट्र
 - 2. राजस्थान
 - 3. गुजरात
 - 4. छत्तीसगढ़

Question ID : 264330160794
Option 1 ID : 264330630507
Option 2 ID : 264330630509
Option 3 ID : 264330630508
Option 4 ID : 264330630510
Status : Answered
Chosen Option : 4

Q.18 Born on _____, Mohandas Karamchand Gandhi whose birthday is celebrated as Gandhi Jayanti, successfully led India's non-violence movement against the British.

- Ans
- 1. 2 October 1868
 - 2. 2 October 1870
 - 3. 2 October 1867
 - 4. 2 October 1869

Question ID : 264330160856
Option 1 ID : 264330630756
Option 2 ID : 264330630758
Option 3 ID : 264330630755
Option 4 ID : 264330630757
Status : Answered
Chosen Option : 4

Q.19 ISSF जूनियर विश्व कप 2023 में भारत पदक तालिका में शीर्ष पर रहा। यह प्रतियोगिता कहां आयोजित की गई थी?

- Ans
- 1. इटली
 - 2. ऑस्ट्रेलिया
 - 3. आज़रबाइजान
 - 4. जर्मनी

Question ID : 264330161145
Option 1 ID : 264330631911
Option 2 ID : 264330631912
Option 3 ID : 264330631913
Option 4 ID : 264330631914
Status : Answered
Chosen Option : 3

Q.20 निम्नलिखित में से कौन-सी कैबिनेट समिति नहीं है?

- Ans
- 1. कैबिनेट की नियुक्ति समिति (Appointment Committee of the Cabinet)
 - 2. राजनीतिक मामलों की समिति (Committee on Political Affairs)
 - 3. निवेश और विकास संबंधी समिति (Committee on Investment and Growth)
 - 4. मंत्रियों के बीच विवाद पर समिति (Committee on Conflicts among Ministers)

Question ID : 264330160862

Option 1 ID : 264330630780

Option 2 ID : 264330630779

Option 3 ID : 264330630781

Option 4 ID : 264330630782

Status : Answered

Chosen Option : 2

Q.21 शिक्षा और संस्कृति को बढ़ावा देने के लिए भारतीय विद्या भवन की स्थापना किसने की?

- Ans
- 1. डॉ. कन्हैयालाल मानेकलाल मुंशी
 - 2. डॉ. आत्माराम पांडुरंग
 - 3. गोपाल कृष्ण गोखले
 - 4. डॉ. बाबासाहेब अम्बेडकर

Question ID : 264330160882

Option 1 ID : 264330630861

Option 2 ID : 264330630860

Option 3 ID : 264330630859

Option 4 ID : 264330630862

Status : Answered

Chosen Option : 1

Q.22 भारतीय संविधान का कौन-सा अनुच्छेद सभी श्रमिकों के लिए जीवनयापन योग्य वेतन और सामाजिक और सांस्कृतिक अवसरों के साथ एक सभ्य जीवन स्तर सुरक्षित करता है?

- Ans
- 1. अनुच्छेद 43
 - 2. अनुच्छेद 40
 - 3. अनुच्छेद 39
 - 4. अनुच्छेद 41

Question ID : 264330161398

Option 1 ID : 264330632922

Option 2 ID : 264330632920

Option 3 ID : 264330632919

Option 4 ID : 264330632921

Status : Answered

Chosen Option : 1

Q.23 Which of the following is a white to yellowish solid with a weak aromatic odour purified by the process of sublimation?

- Ans
- 1. Titanyl
 - 2. Orthovanadate
 - 3. Anthracene
 - 4. Dysprosium

Question ID : 264330161056

Option 1 ID : 264330631557

Option 2 ID : 264330631558

Option 3 ID : 264330631555

Option 4 ID : 264330631556

Status : Answered

Chosen Option : 3

Q.24 95 वर्षीय भगवानी देवी और 106 वर्षीय रामबाई को उनकी उपलब्धियों के लिए संयुक्त रूप से बीबीसी विशेष ट्रॉफी (BBC special trophy) से सम्मानित किया गया, जहां देवी ने फिनलैंड के टाम्परे (Tampere) में _____ में 100 मीटर स्प्रिंट में स्वर्ण पदक जीता।

- Ans
- 1. 2022 राष्ट्रीय सीनियर खेल (2022 National Senior Games)
 - 2. सीनियर स्पोर्ट्स इंटरनेशनल मीट 2022 (Senior Sports International Meet 2022)
 - 3. हंट्समैन वर्ल्ड सीनियर गेम्स 2022 (Huntsman World Senior Games 2022)
 - 4. 2022 विश्व मास्टर्स एथलेटिक्स चैंपियनशिप (2022 World Masters Athletics Championships)

Question ID : 264330161438
 Option 1 ID : 264330633080
 Option 2 ID : 264330633079
 Option 3 ID : 264330633082
 Option 4 ID : 264330633081
 Status : Answered
 Chosen Option : 2

Q.25 टी.एन. राजरत्नम पिल्लई (TN Rajarathnam Pillai) निम्नलिखित में से कौन-से संगीत वाद्ययंत्र के वादक हैं?

- Ans
- 1. घटम
 - 2. सारंगी
 - 3. नादस्वरम
 - 4. शहनाई

Question ID : 264330155466
 Option 1 ID : 264330609269
 Option 2 ID : 264330609267
 Option 3 ID : 264330609268
 Option 4 ID : 264330609270
 Status : Answered
 Chosen Option : 3

Section : English Language and Comprehension

Q.1 The following sentence has been split into four segments. Identify the segment that contains a spelling error.

Several days later, / he received a written / comeunication from the magistrate / that the case has been dropped.

- Ans
- 1. Several days later,
 - 2. he received a written
 - 3. comeunication from the magistrate
 - 4. that the case has been dropped

Question ID : 264330152983
 Option 1 ID : 264330599503
 Option 2 ID : 264330599504
 Option 3 ID : 264330599505
 Option 4 ID : 264330599506
 Status : Answered
 Chosen Option : 3

Q.2 Select the option that can be used as a one-word substitute for the given group of words.

A man whose wife is dead

- Ans 1. Widower
 2. Ascetic
 3. Widow
 4. Bachelor

Question ID : 264330152735

Option 1 ID : 264330598540

Option 2 ID : 264330598541

Option 3 ID : 264330598539

Option 4 ID : 264330598542

Status : Answered

Chosen Option : 1

Q.3 Select the most appropriate option that can substitute the underlined segment in the given sentence.

No sooner did he finished his examination than he left for his cricket training centre.

- Ans 1. no sooner did he finish
 2. no sooner than he finished
 3. no sooner than he did finished
 4. no sooner had he finish

Question ID : 264330153505

Option 1 ID : 264330601534

Option 2 ID : 264330601533

Option 3 ID : 264330601532

Option 4 ID : 264330601531

Status : Answered

Chosen Option : 1

Q.4 Parts of the following sentence have been given as options. Select the option that contains an error.

They will start their journey after the breakfast.

- Ans 1. will start
 2. their journey
 3. They
 4. after the breakfast

Question ID : 264330152793

Option 1 ID : 264330598764

Option 2 ID : 264330598765

Option 3 ID : 264330598763

Option 4 ID : 264330598766

Status : Answered

Chosen Option : 4

Q.5 Select the **INCORRECTLY** spelt word.

- Ans** 1. Wholeness
 2. Overwhelming
 3. Legandry
 4. Inclusive

Question ID : 264330152782
Option 1 ID : 264330598722
Option 2 ID : 264330598719
Option 3 ID : 264330598721
Option 4 ID : 264330598720
Status : Answered
Chosen Option : 3

Q.6 Select the most appropriate **ANTONYM** of the given word.
Humane

- Ans** 1. Proud
 2. Kind
 3. Cruel
 4. Imperfect

Question ID : 264330152741
Option 1 ID : 264330598565
Option 2 ID : 264330598563
Option 3 ID : 264330598564
Option 4 ID : 264330598566
Status : Answered
Chosen Option : 3

Q.7 Select the correctly spelt word.

- Ans** 1. Prevenseon
 2. Prevention
 3. Previnsion
 4. Prevension

Question ID : 264330153086
Option 1 ID : 264330599909
Option 2 ID : 264330599910
Option 3 ID : 264330599908
Option 4 ID : 264330599907
Status : Answered
Chosen Option : 2

Q.8 Parts of the given sentence have been underlined. One of them contains an error. The underlined parts are given as options with some changes. Select the option that correctly rectifies the error.

He is good at playing the guitar than his brother.

Ans 1. is better

2. in playing

3. guitar

4. to

Question ID : 264330153172

Option 1 ID : 264330600247

Option 2 ID : 264330600248

Option 3 ID : 264330600249

Option 4 ID : 264330600250

Status : Answered

Chosen Option : 1

Q.9 Select the most appropriate ANTONYM of the word given in brackets to fill in the blank.

The company is looking for some _____ (idle) workers who can join the organisation immediately.

Ans 1. diligent

2. coy

3. callous

4. sober

Question ID : 264330152694

Option 1 ID : 264330598381

Option 2 ID : 264330598380

Option 3 ID : 264330598379

Option 4 ID : 264330598382

Status : Answered

Chosen Option : 1

Q.10 Select the option that can be used as a one-word substitute for the underlined group of words.

He simply continued to say something in order to convey information in a calm voice.

Ans 1. dictate

2. teach

3. speak

4. spell

Question ID : 264330152706

Option 1 ID : 264330598424

Option 2 ID : 264330598426

Option 3 ID : 264330598423

Option 4 ID : 264330598425

Status : Answered

Chosen Option : 1

Q.11 Select the most appropriate meaning of the underlined idiom.
After years of rivalry, the two families decided to bury the hatchet.

- Ans**
- 1. To continue an old quarrel
 - 2. To end a quarrel by never talking to each other
 - 3. To end a quarrel and become friendly
 - 4. To start a new quarrel

Question ID : 264330153411
Option 1 ID : 264330601181
Option 2 ID : 264330601180
Option 3 ID : 264330601182
Option 4 ID : 264330601179
Status : Answered
Chosen Option : 3

Q.12 The following sentence has been split into four segments. Identify the segment that contains an error.
Did / her friend / went to / school yesterday?

- Ans**
- 1. went to
 - 2. school yesterday
 - 3. her friend
 - 4. Did

Question ID : 264330155318
Option 1 ID : 264330608713
Option 2 ID : 264330608714
Option 3 ID : 264330608712
Option 4 ID : 264330608711
Status : Answered
Chosen Option : 1

Q.13 Select the most appropriate option that can substitute the underlined segment in the given sentence.
The Delhi administration is seriously worried about the warning to civic health posed by the polluted waters of Yamuna.

- Ans**
- 1. a peril to civic health
 - 2. the notice to civic health
 - 3. the plague to civic health
 - 4. the threat to civic health

Question ID : 264330151810
Option 1 ID : 264330594868
Option 2 ID : 264330594870
Option 3 ID : 264330594869
Option 4 ID : 264330594867
Status : Answered
Chosen Option : 4

Q.14 The following sentence has been split into four segments. Identify the segment that contains a grammatical error.

Mohan is respected / by everyone / because he works / hardly.

- Ans
- 1. by everyone
 - 2. because he works
 - 3. hardly
 - 4. Mohan is respected

Question ID : 264330153181
Option 1 ID : 264330600284
Option 2 ID : 264330600285
Option 3 ID : 264330600286
Option 4 ID : 264330600283
Status : Answered
Chosen Option : 3

Q.15 Select the most appropriate meaning of the given idiom.
Day and night

- Ans
- 1. Continuously
 - 2. Clumsily
 - 3. Adversely
 - 4. Diligently

Question ID : 264330151828
Option 1 ID : 264330594939
Option 2 ID : 264330594942
Option 3 ID : 264330594941
Option 4 ID : 264330594940
Status : Answered
Chosen Option : 1

Q.16 Select the most appropriate ANTONYM of the given word.
Humility

- Ans
- 1. Shyness
 - 2. Timidity
 - 3. Arrogance
 - 4. Obedience

Question ID : 264330152776
Option 1 ID : 264330598696
Option 2 ID : 264330598698
Option 3 ID : 264330598695
Option 4 ID : 264330598697
Status : Answered
Chosen Option : 3

Q.17 The following sentence has been split into four segments. Identify the segment that contains an error.

They had been dancing / for an hour / when our dance teacher / had arrived.

- Ans
- 1. when our dance teacher
 - 2. They had been dancing
 - 3. for an hour
 - 4. had arrived

Question ID : 264330143055

Option 1 ID : 264330560497

Option 2 ID : 264330560495

Option 3 ID : 264330560496

Option 4 ID : 264330560498

Status : Answered

Chosen Option : 3

Q.18 Select the most appropriate idiom to fill in the blank.

Jane, please don't tell me fairy tales; I just want to know the real matter _____.

- Ans
- 1. in the cold
 - 2. in a fortnight
 - 3. in the long run
 - 4. in a nutshell

Question ID : 264330153098

Option 1 ID : 264330599957

Option 2 ID : 264330599956

Option 3 ID : 264330599958

Option 4 ID : 264330599955

Status : Answered

Chosen Option : 2

Q.19 Select the most appropriate meaning of the underlined idiom.

The shopkeeper was sly as a fox and tried to sell off the old stock.

- Ans
- 1. smart and clever
 - 2. slow
 - 3. suspicious
 - 4. in confusion or disagreement

Question ID : 264330153643

Option 1 ID : 264330602043

Option 2 ID : 264330602044

Option 3 ID : 264330602046

Option 4 ID : 264330602045

Status : Answered

Chosen Option : 1

Q.20 Select the most appropriate option to fill in the blank.
Bhanu, the security guard, asks everyone entering my building to show their _____ card.

- Ans 1. identity
 2. place
 3. self
 4. name

Question ID : 264330152582
Option 1 ID : 264330597932
Option 2 ID : 264330597933
Option 3 ID : 264330597934
Option 4 ID : 264330597931
Status : Answered
Chosen Option : 1

Comprehension:

In the following passage, some words have been deleted. Read the passage carefully and select the most appropriate option to fill in each blank.
Effective communication is about more than just exchanging information. It's about understanding the emotion and intentions (1)_____ the information. As well as being able to clearly convey a message, you need to also (2)_____ in a way that gains the full meaning of what's being said and makes the other person feel heard and understood. For many of us, communicating more clearly and effectively requires learning some (3)_____ skills. Whether you're trying to improve communication with your spouse, kids, boss, or coworkers, learning these skills can (4)_____ your connections to others, build greater trust and respect, and (5)_____ teamwork, problem solving, and your overall social and emotional health.

SubQuestion No : 21

Q.21 Select the most appropriate option to fill in blank number 1.

- Ans 1. behind
 2. in front of
 3. above
 4. below

Question ID : 264330153016
Option 1 ID : 264330599632
Option 2 ID : 264330599634
Option 3 ID : 264330599631
Option 4 ID : 264330599633
Status : Answered
Chosen Option : 1

Comprehension:

In the following passage, some words have been deleted. Read the passage carefully and select the most appropriate option to fill in each blank.

Effective communication is about more than just exchanging information. It's about understanding the emotion and intentions (1)_____ the information. As well as being able to clearly convey a message, you need to also (2)_____ in a way that gains the full meaning of what's being said and makes the other person feel heard and understood. For many of us, communicating more clearly and effectively requires learning some (3)_____ skills. Whether you're trying to improve communication with your spouse, kids, boss, or coworkers, learning these skills can (4)_____ your connections to others, build greater trust and respect, and (5)_____ teamwork, problem solving, and your overall social and emotional health.

SubQuestion No : 22

Q.22 Select the most appropriate option to fill in blank number 2.

- Ans 1. think
 2. talk
 3. listen
 4. speak

Question ID : 264330153017

Option 1 ID : 264330599638

Option 2 ID : 264330599637

Option 3 ID : 264330599635

Option 4 ID : 264330599636

Status : Answered

Chosen Option : 3

Comprehension:

In the following passage, some words have been deleted. Read the passage carefully and select the most appropriate option to fill in each blank.

Effective communication is about more than just exchanging information. It's about understanding the emotion and intentions (1)_____ the information. As well as being able to clearly convey a message, you need to also (2)_____ in a way that gains the full meaning of what's being said and makes the other person feel heard and understood. For many of us, communicating more clearly and effectively requires learning some (3)_____ skills. Whether you're trying to improve communication with your spouse, kids, boss, or coworkers, learning these skills can (4)_____ your connections to others, build greater trust and respect, and (5)_____ teamwork, problem solving, and your overall social and emotional health.

SubQuestion No : 23

Q.23 Select the most appropriate option to fill in blank number 3.

- Ans 1. boring
 2. trivial
 3. wasteful
 4. important

Question ID : 264330153018

Option 1 ID : 264330599639

Option 2 ID : 264330599642

Option 3 ID : 264330599641

Option 4 ID : 264330599640

Status : Answered

Chosen Option : 4

Comprehension:

In the following passage, some words have been deleted. Read the passage carefully and select the most appropriate option to fill in each blank.

Effective communication is about more than just exchanging information. It's about understanding the emotion and intentions (1)_____ the information. As well as being able to clearly convey a message, you need to also (2)_____ in a way that gains the full meaning of what's being said and makes the other person feel heard and understood. For many of us, communicating more clearly and effectively requires learning some (3)_____ skills. Whether you're trying to improve communication with your spouse, kids, boss, or coworkers, learning these skills can (4)_____ your connections to others, build greater trust and respect, and (5)_____ teamwork, problem solving, and your overall social and emotional health.

SubQuestion No : 24

Q.24 Select the most appropriate option to fill in blank number 4.

- Ans 1. hamper
 2. trivialise
 3. disturb
 4. deepen

Question ID : 264330153019

Option 1 ID : 264330599645

Option 2 ID : 264330599643

Option 3 ID : 264330599644

Option 4 ID : 264330599646

Status : Answered

Chosen Option : 4

Comprehension:

In the following passage, some words have been deleted. Read the passage carefully and select the most appropriate option to fill in each blank.

Effective communication is about more than just exchanging information. It's about understanding the emotion and intentions (1)_____ the information. As well as being able to clearly convey a message, you need to also (2)_____ in a way that gains the full meaning of what's being said and makes the other person feel heard and understood. For many of us, communicating more clearly and effectively requires learning some (3)_____ skills. Whether you're trying to improve communication with your spouse, kids, boss, or coworkers, learning these skills can (4)_____ your connections to others, build greater trust and respect, and (5)_____ teamwork, problem solving, and your overall social and emotional health.

SubQuestion No : 25

Q.25 Select the most appropriate option to fill in blank number 5.

- Ans 1. hamper
 2. hasten
 3. improve
 4. disturb

Question ID : 264330153020

Option 1 ID : 264330599648

Option 2 ID : 264330599649

Option 3 ID : 264330599647

Option 4 ID : 264330599650

Status : Answered

Chosen Option : 3

SSC MTS 2023 Tier 1 Sept 5 Shift 3 Question Paper with Answers

Roll Number	
Candidate Name	
Exam Date	05/09/2023
Exam Time	4:00 PM - 6:00 PM
Subject	MTS Non Tech Havaladar CBIC and CBN Examination 2023

Section : Numerical and Mathematical Ability

Q.1 In how many years will a sum of ₹18,000 at 20% per annum compounded half yearly becomes ₹23,958?

- Ans**
- ✓ 1. $1\frac{1}{2}$
 - ✗ 2. $3\frac{1}{2}$
 - ✗ 3. $1\frac{1}{4}$
 - ✗ 4. $2\frac{1}{2}$

Question ID : 264330154089

Option 1 ID : 264330603820

Option 2 ID : 264330603821

Option 3 ID : 264330603822

Option 4 ID : 264330603819

Status : Answered

Chosen Option : 1

Q.2 Rashmi and Tina can do a piece of work in 20 and 30 days, respectively. If they work at it on alternate days with Rashmi beginning, then, in how many days will the work be over?

- Ans**
- ✗ 1. 28
 - ✗ 2. 26
 - ✓ 3. 24
 - ✗ 4. 12

Question ID : 264330156119

Option 1 ID : 264330611878

Option 2 ID : 264330611877

Option 3 ID : 264330611876

Option 4 ID : 264330611875

Status : Answered

Chosen Option : 3

Q.3 A swimmer swims downstream from point A to point B in 4 hours. It covers the same distance upstream in 5 hours. If the speed of the stream is 2 km/h, what is the distance between A and B:

- Ans**
- 1. 80 km
 - 2. 72 km
 - 3. 60 km
 - 4. 100 km

Question ID : 264330154058
Option 1 ID : 264330603697
Option 2 ID : 264330603698
Option 3 ID : 264330603695
Option 4 ID : 264330603696
Status : Answered
Chosen Option : 1

Q.4 The average of the two numbers is 48. If 3 is added to a smaller number, then the ratio between them is 11 : 20. Find the larger number. (Round up to two decimal places).

- Ans**
- 1. 40.87
 - 2. 3.87
 - 3. 63.87
 - 4. 70.87

Question ID : 264330156343
Option 1 ID : 264330612771
Option 2 ID : 264330612773
Option 3 ID : 264330612772
Option 4 ID : 264330612774
Status : Answered
Chosen Option : 3

Q.5 In a group of people, 70% are men and 30% are women. The average age of the men is 50 years and that of the women is 40 years. Find the average age of all the members in the group (in years).

- Ans**
- 1. 48
 - 2. 47
 - 3. 46
 - 4. 45

Question ID : 264330153835
Option 1 ID : 264330602804
Option 2 ID : 264330602805
Option 3 ID : 264330602803
Option 4 ID : 264330602806
Status : Answered
Chosen Option : 2

Q.6 Simplify: $\frac{\frac{1}{3} \div \frac{1}{3} \times \frac{1}{3}}{\frac{1}{3} + \frac{1}{3} - \frac{1}{3}} = ?$

- Ans
- 1. 3
 - 2. $\frac{1}{9}$
 - 3. 1
 - 4. $\frac{1}{3}$

Question ID : 264330154040
 Option 1 ID : 264330603625
 Option 2 ID : 264330603626
 Option 3 ID : 264330603624
 Option 4 ID : 264330603623
 Status : Answered
 Chosen Option : 3

Q.7 A man and a boy can do a piece of work in 12 days. If the man works alone for the last 3 days, it is completed in 13 days. How long would the boy take to do it alone?

- Ans
- 1. 36 days
 - 2. 18 days
 - 3. 72 days
 - 4. 30 days

Question ID : 264330156194
 Option 1 ID : 264330612176
 Option 2 ID : 264330612178
 Option 3 ID : 264330612175
 Option 4 ID : 264330612177
 Status : Answered
 Chosen Option : 1

Q.8 A sum of money becomes seven times in 16 years at simple interest per annum. Find the per annum rate of interest.

- Ans
- 1. 25.8%
 - 2. 39.2%
 - 3. 20.3%
 - 4. 37.5%

Question ID : 264330155746
 Option 1 ID : 264330610388
 Option 2 ID : 264330610390
 Option 3 ID : 264330610387
 Option 4 ID : 264330610389
 Status : Answered
 Chosen Option : 4

Q.9 A train covers a certain distance with a speed of 72 km/h in the first two hours of its journey and 120 km in the next 1.5 hours. What is its average speed (in km/h, rounded off to the nearest integer) for the entire journey?

- Ans**
- ✓ 1. 75
 - ✗ 2. 78
 - ✗ 3. 73
 - ✗ 4. 79

Question ID : 264330156471

Option 1 ID : 264330613274

Option 2 ID : 264330613272

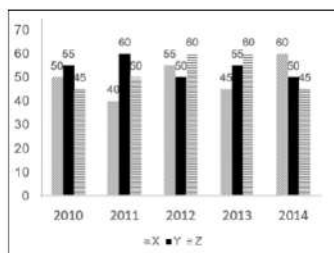
Option 3 ID : 264330613273

Option 4 ID : 264330613271

Status : Answered

Chosen Option : 3

Q.10 The graph shows the production of tyres (in Lakhs) by three different companies X, Y, and Z over the years. Directions: Study the following graph carefully to answer the question given below it.



What is the percentage increase in production of company X from 2011 to 2012?

- Ans**
- ✓ 1. 37.5%
 - ✗ 2. 32.5%
 - ✗ 3. 38.25%
 - ✗ 4. 35%

Question ID : 264330153889

Option 1 ID : 264330603021

Option 2 ID : 264330603022

Option 3 ID : 264330603019

Option 4 ID : 264330603020

Status : Answered

Chosen Option : 1

Q.11 By selling 8 items, a shopkeeper gains the selling price of 2 items. The gain percentage of the shopkeeper is:

- Ans**
- ✗ 1. 25%
 - ✗ 2. $16\frac{2}{3}\%$
 - ✓ 3. $33\frac{1}{3}\%$
 - ✗ 4. 30%

Question ID : 264330161981

Option 1 ID : 264330635254

Option 2 ID : 264330635253

Option 3 ID : 264330635252

Option 4 ID : 264330635251

Status : Answered

Chosen Option : 3

Q.12 Zeenat earns 20% on an investment, but she loses 10% on another investment. If the two investments are respectively in the ratio of 3 : 5, then what is the percentage gain or loss for Zeenat on the two investments taken together?

- Ans**
- 1. 1.25% Gain
 - 2. 2.25% Loss
 - 3. 1.25% Loss
 - 4. 2.25% Gain

Question ID : 264330155705
Option 1 ID : 264330610224
Option 2 ID : 264330610225
Option 3 ID : 264330610223
Option 4 ID : 264330610226
Status : Answered
Chosen Option : 1

Q.13 Find the arithmetic mean of 28, 21, 39, 33, 36, 23.

- Ans**
- 1. 30
 - 2. 32
 - 3. 26
 - 4. 28

Question ID : 264330155953
Option 1 ID : 264330611211
Option 2 ID : 264330611213
Option 3 ID : 264330611214
Option 4 ID : 264330611212
Status : Answered
Chosen Option : 1

Q.14 An athlete crosses a 3000-m distance in 10 minutes. What is his speed (in km/h)?

- Ans**
- 1. 16
 - 2. 12
 - 3. 14
 - 4. 18

Question ID : 264330156231
Option 1 ID : 264330612325
Option 2 ID : 264330612323
Option 3 ID : 264330612324
Option 4 ID : 264330612326
Status : Answered
Chosen Option : 4

Q.15 The diameter of the base of a right circular cylinder is 36 cm and its height is 21 cm. Find the volume of the cylinder.

(Take $\pi = \frac{22}{7}$)

- Ans**
- 1. 2376 cm³
 - 2. 85536 cm³
 - 3. 21384 cm³
 - 4. 5346 cm³

Question ID : 264330156437

Option 1 ID : 264330613141

Option 2 ID : 264330613139

Option 3 ID : 264330613142

Option 4 ID : 264330613140

Status : Answered

Chosen Option : 3

Q.16 Rupees 66,000 is to be divided amongst Asha, Bhupinder and Gargi in such a way that the ratio of their shares is to be:
Asha : Bhupinder = 9 : 5 and Bhupinder : Gargi = 2 : 1. How much should Asha get?

- Ans**
- 1. ₹38,000
 - 2. ₹36,000
 - 3. ₹32,000
 - 4. ₹34,000

Question ID : 264330154124

Option 1 ID : 264330603962

Option 2 ID : 264330603961

Option 3 ID : 264330603959

Option 4 ID : 264330603960

Status : Answered

Chosen Option : 2

Q.17 Three numbers are in the ratio 3 : 5 : 7. If their LCM is 2625, find their HCF.

- Ans**
- 1. 100
 - 2. 125
 - 3. 50
 - 4. 25

Question ID : 264330155986

Option 1 ID : 264330611345

Option 2 ID : 264330611346

Option 3 ID : 264330611343

Option 4 ID : 264330611344

Status : Answered

Chosen Option : 4

- Q.18** The table below shows the marks obtained by students A, B and C in French and Geography in an examination. The maximum marks for each subject are 100. Study the table carefully and answer the question that follows.

Student	French	Geography
A	98	100
B	89	98
C	92	99

What is the ratio of the average marks of the three students in Geography to that in French?

- Ans**
1. 32 : 28
2. 28 : 32
3. 33 : 31
4. 31 : 33

Question ID : 264330156497
 Option 1 ID : 264330613375
 Option 2 ID : 264330613376
 Option 3 ID : 264330613377
 Option 4 ID : 264330613378
 Status : Answered
 Chosen Option : 3

- Q.19** A contractor reduces the working time of a week (Monday to Saturday) from 48 hours to 36 hours for his workers without changing the payment. What is the percentage increase in the hourly rate?

- Ans**
1. $30\frac{1}{3}\%$
2. $33\frac{1}{3}\%$
3. $67\frac{2}{3}\%$
4. $70\frac{2}{3}\%$

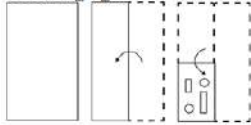
Question ID : 264330156473
 Option 1 ID : 264330613281
 Option 2 ID : 264330613279
 Option 3 ID : 264330613280
 Option 4 ID : 264330613282
 Status : Answered
 Chosen Option : 2

- Q.20** The length of the median of an equilateral triangle is $6\sqrt{3}$ cm. The area of the triangle is:

- Ans**
1. $36\sqrt{3}$ cm²
2. 36 cm²
3. 72 cm²
4. $72\sqrt{3}$ cm²

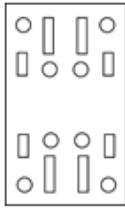
Question ID : 264330156500
 Option 1 ID : 264330613389
 Option 2 ID : 264330613388
 Option 3 ID : 264330613390
 Option 4 ID : 264330613387
 Status : Answered
 Chosen Option : 1

Q.1 The sequence of folding a piece of paper and the manner in which the folded paper is cut is shown in the following figures. How would this paper look when unfolded?

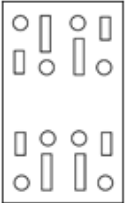


Ans

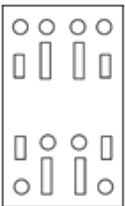
✓ 1.



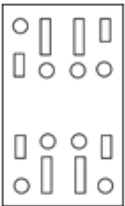
✗ 2.



✗ 3.



✗ 4.



Question ID : 264330155608

Option 1 ID : 264330609837

Option 2 ID : 264330609838

Option 3 ID : 264330609835

Option 4 ID : 264330609836

Status : Answered

Chosen Option : 1

Q.2 21 is related to 147 following a certain logic. Following the same logic, 32 is related to 224. To which of the following is 52 related to, following the same logic?

Ans ✗ 1. 356

✓ 2. 364

✗ 3. 365

✗ 4. 346

Question ID : 264330151590

Option 1 ID : 264330593990

Option 2 ID : 264330593987

Option 3 ID : 264330593988

Option 4 ID : 264330593989

Status : Answered

Chosen Option : 2

Q.3 Find out the correct alternative that when filled in the blanks in the same sequence will make the series logically complete.

LV_J_VFJ T_GJ XVH_BV_J

- Ans**
- ✓ 1. EPVJI
 - ✗ 2. DVJLE
 - ✗ 3. DBRPE
 - ✗ 4. EJBLR

Question ID : 264330154725

Option 1 ID : 264330606363

Option 2 ID : 264330606365

Option 3 ID : 264330606366

Option 4 ID : 264330606364

Status : Answered

Chosen Option : 1

Q.4 Select the combination of letters that when sequentially placed in the blanks of the given series, will complete the series.

GGHG _GG_G_

- Ans**
- ✓ 1. HGHHG
 - ✗ 2. GHHGH
 - ✗ 3. HGGHH
 - ✗ 4. HHHGH

Question ID : 264330151640

Option 1 ID : 264330594189

Option 2 ID : 264330594190

Option 3 ID : 264330594187

Option 4 ID : 264330594188

Status : Answered

Chosen Option : 1

Q.5 उस शब्द-युग्म का चयन कीजिए जो नीचे दिए गए शब्दों के युग्म में व्यक्त किए गए समान संबंध का सबसे अच्छा निरूपण करता है।

(शब्दों को अर्थपूर्ण हिंदी शब्दों के रूप में माना जाना चाहिए और उन्हें शब्द में अक्षरों की संख्या/व्यंजन/स्वरों की संख्या के आधार पर एक दूसरे से संबंधित नहीं किया जाना चाहिए।)

हकलाना : बातचीत

- Ans**
- ✓ 1. दृष्टिवैषम्य : दृष्टि
 - ✗ 2. शोर मचाना : सुनना
 - ✗ 3. सुगंध : महक
 - ✗ 4. नोवोकेन : स्पर्श

Question ID : 264330154634

Option 1 ID : 264330606001

Option 2 ID : 264330605999

Option 3 ID : 264330606000

Option 4 ID : 264330606002

Status : Answered

Chosen Option : 1

Q.6 What should come in place of the question mark (?) in the given series based on the English alphabetical order?

FQA, HTE, JWI, LZM, ?

- Ans**
- 1. ODR
 - 2. NCQ
 - 3. MDP
 - 4. OEP

Question ID : **264330156296**
 Option 1 ID : **264330612584**
 Option 2 ID : **264330612586**
 Option 3 ID : **264330612583**
 Option 4 ID : **264330612585**
 Status : **Answered**
 Chosen Option : **2**

Q.7 Which figure should replace the question mark (?) if the following figure series were to be continued?

C	P	A	X	↑	P	P	A	X	C	▷	A	
	▷			C		↑			P			?
X		↑	▷		A	C		▷	↑		X	

Ans

1.

A	P	C
	▷	
X		↑

2.

A	P	X
	▷	
C		↑

3.

A	X	P
	C	
▷		↑

4.

A	X	C
	▷	
P		↑

Question ID : **264330154753**
 Option 1 ID : **264330606475**
 Option 2 ID : **264330606477**
 Option 3 ID : **264330606478**
 Option 4 ID : **264330606476**
 Status : **Answered**
 Chosen Option : **4**

Q.8 In a certain code language, 'CHEW' is coded as '39' and 'FORE' is coded as '44'. What is the code for 'GLIT' in the given code language?

- Ans** 1. 48
 2. 51
 3. 50
 4. 52

Question ID : 264330155834
Option 1 ID : 264330610740
Option 2 ID : 264330610741
Option 3 ID : 264330610739
Option 4 ID : 264330610742
Status : Answered
Chosen Option : 1

Q.9 What will come in the place of '?' in the following equation, if '+' and '-' are interchanged and '×' and '÷' are interchanged?
 $92 + 18 \div 2 - 125 \times 25 = ?$

- Ans** 1. 61
 2. 41
 3. 51
 4. 71

Question ID : 264330155671
Option 1 ID : 264330610087
Option 2 ID : 264330610089
Option 3 ID : 264330610088
Option 4 ID : 264330610090
Status : Answered
Chosen Option : 1

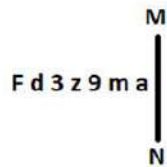
Q.10 What should come in place of '?' in the given series?

22 24 28 36 52 ?

- Ans** 1. 84
 2. 88
 3. 90
 4. 72

Question ID : 264330151453
Option 1 ID : 264330593440
Option 2 ID : 264330593441
Option 3 ID : 264330593442
Option 4 ID : 264330593439
Status : Answered
Chosen Option : 1

Q.11 Select the correct mirror image of the given figure when the mirror is placed at MN as shown below.



- Ans
- 1. s w e z 3 b 7
 - 2. m a e z 3 b 7
 - 3. s m e z 3 b 7
 - 4. s m e z 3 b 7

Question ID : 264330151516

Option 1 ID : 264330593693

Option 2 ID : 264330593694

Option 3 ID : 264330593692

Option 4 ID : 264330593691

Status : Answered

Chosen Option : 4

Q.12 What will come in the place of the question mark (?) in the following equation, if '+' and '-' are interchanged and 'x' and '÷' are interchanged?

$$93 + 5 + 4 - 45 \times 5 = ?$$

- Ans
- 1. 490
 - 2. 470
 - 3. 495
 - 4. 480

Question ID : 264330154613

Option 1 ID : 264330605917

Option 2 ID : 264330605915

Option 3 ID : 264330605918

Option 4 ID : 264330605916

Status : Answered

Chosen Option : 2

Q.13 In a certain code language, 'OPEN' is coded as '4582' and 'PORE' is coded as '2385'. What is the code for 'R' in the given code language?

- Ans
- 1. 8
 - 2. 2
 - 3. 3
 - 4. 5

Question ID : 264330151700

Option 1 ID : 264330594430

Option 2 ID : 264330594428

Option 3 ID : 264330594429

Option 4 ID : 264330594427

Status : Answered

Chosen Option : 3

Q.14 What should come in place of '?' in the given series?

6 25 82 253 766 ?

- Ans
- 1. 2569
 - 2. 2491
 - 3. 2485
 - 4. 2305

Question ID : 264330151473
 Option 1 ID : 264330593522
 Option 2 ID : 264330593521
 Option 3 ID : 264330593520
 Option 4 ID : 264330593519
 Status : Answered
 Chosen Option : 4

Q.15 Six people, C, D, E, F, G and H are sitting in a straight line, facing north. Only three people sit to the right of G. Only two people sit between G and E. C sits to the immediate right of F and to the immediate left of G. H is not the immediate neighbour of E.

Who are sitting between G and E?

- Ans
- 1. F and C
 - 2. C and D
 - 3. H and E
 - 4. H and D

Question ID : 264330155544
 Option 1 ID : 264330609579
 Option 2 ID : 264330609582
 Option 3 ID : 264330609581
 Option 4 ID : 264330609580
 Status : Answered
 Chosen Option : 4

Q.16 In the following number-pairs, the second number is obtained by applying certain mathematical operations to the first number. Select the set in which the numbers are related in the same way as are the numbers of the following sets.

(NOTE: Operations should be performed on the whole numbers, without breaking down the numbers into its constituent digits. E.g. 13 – Operations on 13 such as adding / subtracting / multiplying etc. to 13 can be performed. Breaking down 13 into 1 and 3 and then performing mathematical operations on 1 and 3 is not allowed)

11, 110
 19, 190

- Ans
- 1. 31, 310
 - 2. 22, 440
 - 3. 91, 190
 - 4. 51, 150

Question ID : 264330151618
 Option 1 ID : 264330594099
 Option 2 ID : 264330594101
 Option 3 ID : 264330594102
 Option 4 ID : 264330594100
 Status : Answered
 Chosen Option : 1

Q.17 Read the given statements and conclusions carefully. You have to take the given statements to be true even if they seem to be at variance from commonly known facts. You have to decide which conclusion/s logically follow/s from the given statements.

Statements: Some sofas are teapots. All teapots are printers. Some printers are vases.

Conclusion I: Some teapots are sofas.

Conclusion II: Some vases are printers.

- Ans**
- 1. Neither conclusion (I) nor (II) is follow.
 - 2. Only conclusion (II) is follow.
 - 3. Both conclusions (I) and (II) are follow.
 - 4. Only conclusion (I) is follow.

Question ID : 264330155903
 Option 1 ID : 264330611017
 Option 2 ID : 264330611016
 Option 3 ID : 264330611018
 Option 4 ID : 264330611015
 Status : Answered
 Chosen Option : 3

Q.18 The position of how many letters will remain unchanged if each of the letter in the word 'TIMES' is arranged in alphabetical order?

- Ans**
- 1. Two
 - 2. None
 - 3. Four
 - 4. One

Question ID : 264330154325
 Option 1 ID : 264330604764
 Option 2 ID : 264330604763
 Option 3 ID : 264330604765
 Option 4 ID : 264330604766
 Status : Answered
 Chosen Option : 1

Q.19 What should come in place of '?' in the given series?

5 8 17 44 125 ?

- Ans**
- 1. 391
 - 2. 312
 - 3. 368
 - 4. 283

Question ID : 264330151485
 Option 1 ID : 264330593570
 Option 2 ID : 264330593567
 Option 3 ID : 264330593568
 Option 4 ID : 264330593569
 Status : Answered
 Chosen Option : 3

Q.20 Read the given statements and conclusions carefully. You have to take the given statements to be true even if they seem to be at variance from commonly known facts. You have to decide which conclusion/s logically follow/s from the given statements.

Statements: All blenders are microwaves. Some microwaves are toasters. All toasters are lamps.

Conclusion I: Some blenders are microwaves.

Conclusion II: All toasters are blenders.

- Ans**
- 1. Only conclusion (II) is follow.
 - 2. Both conclusions (I) and (II) are follow.
 - 3. Neither conclusion (I) nor (II) is follow.
 - 4. Only conclusion (I) is follow.

Question ID : 264330155911

Option 1 ID : 264330611048

Option 2 ID : 264330611050

Option 3 ID : 264330611049

Option 4 ID : 264330611047

Status : Answered

Chosen Option : 4

Section : General Awareness

Q.1 How many elements are listed in the modern periodic table?

- Ans**
- 1. 107
 - 2. 81
 - 3. 91
 - 4. 118

Question ID : 264330161331

Option 1 ID : 264330632652

Option 2 ID : 264330632654

Option 3 ID : 264330632653

Option 4 ID : 264330632651

Status : Answered

Chosen Option : 4

Q.2 In which of the following States was the third edition of Khelo India University Games held?

- Ans**
- 1. Jharkhand
 - 2. Uttar Pradesh
 - 3. New Delhi
 - 4. Punjab

Question ID : 264330161146

Option 1 ID : 264330631916

Option 2 ID : 264330631918

Option 3 ID : 264330631917

Option 4 ID : 264330631915

Status : Answered

Chosen Option : 2

Q.3 Which country did India beat in the final to win the 2023 Intercontinental Cup Football championship?

- Ans** 1. Thailand
 2. Lebanon
 3. Mongolia
 4. Vanuatu

Question ID : 264330161139
Option 1 ID : 264330631890
Option 2 ID : 264330631887
Option 3 ID : 264330631889
Option 4 ID : 264330631888
Status : Answered
Chosen Option : 2

Q.4 In which state of India is shifting cultivation known as Bringa?

- Ans** 1. Andhra Pradesh
 2. Manipur
 3. Odisha
 4. Madhya Pradesh

Question ID : 264330160137
Option 1 ID : 264330627890
Option 2 ID : 264330627889
Option 3 ID : 264330627887
Option 4 ID : 264330627888
Status : Marked For Review
Chosen Option : 3

Q.5 What does the acronym 'ATM' stand for?

- Ans** 1. Automated Teller Machine
 2. Automated Transaction Management
 3. Account Tracking Module
 4. All-Time Money

Question ID : 264330157302
Option 1 ID : 264330616571
Option 2 ID : 264330616572
Option 3 ID : 264330616574
Option 4 ID : 264330616573
Status : Answered
Chosen Option : 1

Q.6 Who had founded the first Women's University in India?

- Ans** 1. Dhondo Keshav Karve
 2. Ashutosh Mukherjee
 3. William Hunter
 4. Sayed Ahmed Khan

Question ID : 264330162336
Option 1 ID : 264330636671
Option 2 ID : 264330636672
Option 3 ID : 264330636674
Option 4 ID : 264330636673
Status : Answered
Chosen Option : 3

Q.7 Devendra Jhajharia won which medal/place in World Para Athletics Grand Prix?

- Ans 1. Bronze
 2. Gold
 3. Silver
 4. Fourth

Question ID : 264330158364
Option 1 ID : 264330620817
Option 2 ID : 264330620815
Option 3 ID : 264330620816
Option 4 ID : 264330620818
Status : Answered
Chosen Option : 2

Q.8 In the process of cell division, the formation of phragmoplast between the two daughter nuclei occurs during:

- Ans 1. the G₀ phase
 2. the cytokinesis
 3. the S phase
 4. the karyokinesis

Question ID : 264330156617
Option 1 ID : 264330613858
Option 2 ID : 264330613855
Option 3 ID : 264330613857
Option 4 ID : 264330613856
Status : Answered
Chosen Option : 4

Q.9 In which type of forests are Mahogany, Rosewood and Cinchona trees found in India?

- Ans 1. Tropical Evergreen forests
 2. Tropical Deciduous forests
 3. Mangrove forests
 4. Montane forests

Question ID : 264330160149
Option 1 ID : 264330627937
Option 2 ID : 264330627935
Option 3 ID : 264330627936
Option 4 ID : 264330627938
Status : Answered
Chosen Option : 1

Q.10 Lebang Boomani dance is the harvest dance of _____.

- Ans 1. Mizoram
 2. Tripura
 3. Assam
 4. Meghalaya

Question ID : 264330159062
Option 1 ID : 264330623607
Option 2 ID : 264330623610
Option 3 ID : 264330623609
Option 4 ID : 264330623608
Status : Answered
Chosen Option : 4

Q.11 राष्ट्रीय आय लेखांकन में अंतिम और मध्यवर्ती वस्तुओं/सेवाओं के बीच अंतर करना क्यों महत्वपूर्ण है?

- Ans
- 1. यह उपभोक्ता की प्राथमिकताओं और बाजार की मांग में बदलाव को ट्रैक करने में मदद करता है।
 - 2. यह आर्थिक विकास और उत्पादकता की अधिक सटीक माप करने में सहायता करता है।
 - 3. विभिन्न क्षेत्रों के बीच आय के वितरण में अंतर्दृष्टि प्रदान करता है।
 - 4. यह उत्पादित वस्तुओं और सेवाओं की समग्र गुणवत्ता निर्धारित करने में मदद करता है।

Question ID : 264330157314

Option 1 ID : 264330616622

Option 2 ID : 264330616620

Option 3 ID : 264330616621

Option 4 ID : 264330616619

Status : Answered

Chosen Option : 2

Q.12 Which of the following is NOT a directive principle of state policy?

- Ans
- 1. Separation of the judiciary from executive
 - 2. Reside in any part of India
 - 3. Uniform civil code
 - 4. Protection of monuments

Question ID : 264330159907

Option 1 ID : 264330626978

Option 2 ID : 264330626977

Option 3 ID : 264330626975

Option 4 ID : 264330626976

Status : Answered

Chosen Option : 2

Q.13 In which state is the Sanchi Stupa situated?

- Ans
- 1. Bihar
 - 2. Uttar Pradesh
 - 3. Gujarat
 - 4. Madhya Pradesh

Question ID : 264330160759

Option 1 ID : 264330630370

Option 2 ID : 264330630369

Option 3 ID : 264330630367

Option 4 ID : 264330630368

Status : Answered

Chosen Option : 4

Q.14 भारत का नाममात्र कार्यकारी प्राधिकारी (nominal executive authority) कौन है?

- Ans
- 1. उपराष्ट्रपति
 - 2. महान्यायवादी
 - 3. राष्ट्रपति
 - 4. प्रधानमंत्री

Question ID : 264330159910

Option 1 ID : 264330626990

Option 2 ID : 264330626989

Option 3 ID : 264330626988

Option 4 ID : 264330626987

Status : Answered

Chosen Option : 3

Q.15 Who among the following is the author of the book, 'Unfinished: A Memoir'?

- Ans 1. Alia Bhatt
 2. Priyanka Chopra
 3. Deepika Padukone
 4. Kareena Kapoor

Question ID : 264330161907
Option 1 ID : 264330634956
Option 2 ID : 264330634957
Option 3 ID : 264330634955
Option 4 ID : 264330634958
Status : Answered
Chosen Option : 2

Q.16 The South China Sea is a part of which of the following oceans?

- Ans 1. Arctic Ocean
 2. Pacific Ocean
 3. Southern Ocean
 4. Indian Ocean

Question ID : 264330157835
Option 1 ID : 264330618700
Option 2 ID : 264330618702
Option 3 ID : 264330618701
Option 4 ID : 264330618699
Status : Answered
Chosen Option : 1

Q.17 The official language of which neighbouring country of India is 'Dhivehi'?

- Ans 1. Maldives
 2. Sri Lanka
 3. Bhutan
 4. China

Question ID : 264330160174
Option 1 ID : 264330628038
Option 2 ID : 264330628036
Option 3 ID : 264330628037
Option 4 ID : 264330628035
Status : Answered
Chosen Option : 1

Q.18 Under which scheme of Airport Authority of India did the Jammu and Kashmir Lieutenant Governor inaugurate UMEED Market Place at Srinagar international airport for supporting local art and artisans of Self Help Groups of J&K Rural Livelihood Mission?

- Ans**
- 1. AVSAR Scheme
 - 2. AKASH Scheme
 - 3. AAKAR Scheme
 - 4. ASAR Scheme

Question ID : 264330161408
Option 1 ID : 264330632960
Option 2 ID : 264330632961
Option 3 ID : 264330632962
Option 4 ID : 264330632959
Status : Answered
Chosen Option : 1

Q.19 Who was the Iranian ruler who attacked the city of Delhi and took away an immense amount of wealth in 1739?

- Ans**
- 1. Ahmad Shah Qajar
 - 2. Nadir Shah
 - 3. Ahmad Shah Abdali
 - 4. Abbas I

Question ID : 264330161735
Option 1 ID : 264330634268
Option 2 ID : 264330634269
Option 3 ID : 264330634267
Option 4 ID : 264330634270
Status : Answered
Chosen Option : 3

Q.20 Pandit Bhimsen Joshi belonged to the _____ Gharana.

- Ans**
- 1. Banaras
 - 2. Kirana
 - 3. Agra
 - 4. Dilli

Question ID : 264330155463
Option 1 ID : 264330609258
Option 2 ID : 264330609257
Option 3 ID : 264330609256
Option 4 ID : 264330609255
Status : Answered
Chosen Option : 1

Q.21 Mahari Dance and Gotipua Dance belongs to which of the following states?

- Ans 1. Odisha
 2. Haryana
 3. Uttar Pradesh
 4. Bihar

Question ID : 264330159060
Option 1 ID : 264330623599
Option 2 ID : 264330623600
Option 3 ID : 264330623601
Option 4 ID : 264330623602
Status : Answered
Chosen Option : 1

Q.22 Identify the WRONG pair of dancer and the related dance form from the following.

- Ans 1. Meenakshi Chitharanjan - Bharatanatyam
 2. Kumkum Dhar - Kuchipudi
 3. Sruti Bandopadhyay - Manipuri
 4. Trilochan Mohanta - Chhau

Question ID : 264330155529
Option 1 ID : 264330609519
Option 2 ID : 264330609520
Option 3 ID : 264330609521
Option 4 ID : 264330609522
Status : Answered
Chosen Option : 4

Q.23 Which of the following musicians is popularly known as 'Panchamda'?

- Ans 1. Ravi
 2. Khayam
 3. Naushad
 4. RD Burman

Question ID : 264330160974
Option 1 ID : 264330631228
Option 2 ID : 264330631229
Option 3 ID : 264330631230
Option 4 ID : 264330631227
Status : Answered
Chosen Option : 4

Q.24 The 'Mukteshwar' dance festival is held from 14th to 16th January at the Mukteshwar temple in the state of _____.

- Ans 1. Uttarakhand
 2. Odisha
 3. Madhya Pradesh
 4. Himachal Pradesh

Question ID : 264330160839
Option 1 ID : 264330630687
Option 2 ID : 264330630689
Option 3 ID : 264330630690
Option 4 ID : 264330630688
Status : Answered
Chosen Option : 1

Q.25 Select from among the given options the autobiography of Milkha Singh.

- Ans
- 1. A Shot at History
 - 2. The Race of My Life
 - 3. The Test of My Life
 - 4. One Life Is Not Enough

Question ID : 264330155493
Option 1 ID : 264330609375
Option 2 ID : 264330609376
Option 3 ID : 264330609377
Option 4 ID : 264330609378
Status : Answered
Chosen Option : 4

Section : English Language and Comprehension

Q.1 Parts of the following sentence have been underlined and given as options. Select the option that contains an error.
For an all-too-brief period between the late 1980s and the late 2000s, a world was characterised by convergence.

- Ans
- 1. between the late
 - 2. For an all-too-brief
 - 3. characterised by
 - 4. a world was

Question ID : 264330153194
Option 1 ID : 264330600337
Option 2 ID : 264330600335
Option 3 ID : 264330600338
Option 4 ID : 264330600336
Status : Answered
Chosen Option : 4

Q.2 The sentence given below has spelling errors. Select the sentence without spelling errors.
Let us appreciate, support and contribute our might to the promotional efforts of the community in this direction.

- Ans
- 1. Let us appreciate, support and contribute our might to the promotional efforts of the community in this direction.
 - 2. Let us appreciate, suport and contribute our might to the promotional efforts of the community in this direction.
 - 3. Let us appreciate, support and contribute our might to the promotion all efforts of the community in this direction.
 - 4. Let us appreciate, support and contribute our might to the promotional efforts of the community in this direction.

Question ID : 264330151841
Option 1 ID : 264330594994
Option 2 ID : 264330594991
Option 3 ID : 264330594992
Option 4 ID : 264330594993
Status : Answered
Chosen Option : 4

Q.3 Select the most appropriate option to fill in the blank.
The team had a _____ with respect to the proposal given by Mr. Albert.

- Ans
- 1. descussion
 - 2. discusion
 - 3. disckassion
 - 4. discussion

Question ID : 264330153303
Option 1 ID : 264330600770
Option 2 ID : 264330600769
Option 3 ID : 264330600768
Option 4 ID : 264330600767
Status : Answered
Chosen Option : 4

Q.4 Select the option that can be used as a one-word substitute for the given group of words.
A thing which happens every two years

- Ans
- 1. Century
 - 2. Annual
 - 3. Biennial
 - 4. Bi-monthly

Question ID : 264330152584
Option 1 ID : 264330597940
Option 2 ID : 264330597941
Option 3 ID : 264330597939
Option 4 ID : 264330597942
Status : Answered
Chosen Option : 3

Q.5 Select the most appropriate option that can substitute the underlined words in the following sentence.
Ramya's shoes are polish by her granddaughter.

- Ans
- 1. polishes
 - 2. had polished
 - 3. are polished
 - 4. is polish

Question ID : 264330152577
Option 1 ID : 264330597912
Option 2 ID : 264330597914
Option 3 ID : 264330597913
Option 4 ID : 264330597911
Status : Answered
Chosen Option : 3

Q.6 Select the most appropriate idiom to fill in the blank.

I don't think you should go out in the rain, it's _____.

- Ans
- 1. rain on cats and dogs
 - 2. storming cats and dogs
 - 3. raining cats and dogs
 - 4. raining dogs and puppies

Question ID : 264330153079
Option 1 ID : 264330599881
Option 2 ID : 264330599879
Option 3 ID : 264330599880
Option 4 ID : 264330599882
Status : Answered
Chosen Option : 3

Q.7 Select the most appropriate meaning of the given idiom.
To keep one's temper

- Ans
- 1. To meet with disaster
 - 2. To become impatient
 - 3. To become angry
 - 4. To remain calm

Question ID : 264330153522
Option 1 ID : 264330601601
Option 2 ID : 264330601602
Option 3 ID : 264330601600
Option 4 ID : 264330601599
Status : Answered
Chosen Option : 4

Q.8 Select the correct spelling of the underlined word in the following sentence.

Today's lecture had a profond impact on my friend.

- Ans
- 1. profoun
 - 2. prufound
 - 3. prefound
 - 4. profound

Question ID : 264330153083
Option 1 ID : 264330599896
Option 2 ID : 264330599898
Option 3 ID : 264330599897
Option 4 ID : 264330599895
Status : Answered
Chosen Option : 4

Q.9 Select the most appropriate meaning of the given idiom.
To get cold feet

- Ans 1. To be afraid
 2. To fall sick
 3. To be indifferent
 4. To run for life

Question ID : 264330156175
Option 1 ID : 264330612102
Option 2 ID : 264330612099
Option 3 ID : 264330612100
Option 4 ID : 264330612101
Status : Answered
Chosen Option : 1

Q.10 Select the most appropriate ANTONYM of the underlined word.
His amazing performance made him famous.

- Ans 1. Ordinary
 2. Colliery
 3. Adversary
 4. Binary

Question ID : 264330151816
Option 1 ID : 264330594892
Option 2 ID : 264330594894
Option 3 ID : 264330594891
Option 4 ID : 264330594893
Status : Answered
Chosen Option : 1

Q.11 Select the most appropriate option that can substitute the underlined segment in the given sentence.
The food was too salty eat this morning.

- Ans 1. eating
 2. ate
 3. to ate
 4. to eat

Question ID : 264330153396
Option 1 ID : 264330601124
Option 2 ID : 264330601126
Option 3 ID : 264330601125
Option 4 ID : 264330601123
Status : Answered
Chosen Option : 4

Q.12 Select the most appropriate synonym of the given word.
Elegant

- Ans 1. Mighty
 2. Graceful
 3. Ugly
 4. Tall

Question ID : 264330152747
Option 1 ID : 264330598589
Option 2 ID : 264330598587
Option 3 ID : 264330598588
Option 4 ID : 264330598590
Status : Answered
Chosen Option : 2

Q.13 Parts of the following sentence have been underlined and given as options. Select the option that contains an error.
I will going on an official tour next week.

- Ans 1. on
 2. will going
 3. next week
 4. an official tour

Question ID : 264330153188
Option 1 ID : 264330600312
Option 2 ID : 264330600311
Option 3 ID : 264330600314
Option 4 ID : 264330600313
Status : Answered
Chosen Option : 2

Q.14 Parts of the following sentence have been given as options. Select the option that contains an error.
Shelley and Keats are great writers, but I prefer the last.

- Ans 1. the last
 2. are great writers
 3. but I prefer
 4. Shelley and Keats

Question ID : 264330152803
Option 1 ID : 264330598806
Option 2 ID : 264330598804
Option 3 ID : 264330598805
Option 4 ID : 264330598803
Status : Answered
Chosen Option : 1

Q.15 Select the most appropriate synonym of the given word.
Design

- Ans** 1. Fabricate
 2. Destroy
 3. Inspect
 4. Copy

Question ID : 264330152779
Option 1 ID : 264330598709
Option 2 ID : 264330598707
Option 3 ID : 264330598708
Option 4 ID : 264330598710
Status : Answered
Chosen Option : 1

Q.16 Select the option that can be used as a one-word substitute for the given phrase.
A person who is known for his hatred towards the entire mankind.

- Ans** 1. Insolvent
 2. Philogynist
 3. Mercenary
 4. Misanthrope

Question ID : 264330152672
Option 1 ID : 264330598291
Option 2 ID : 264330598294
Option 3 ID : 264330598293
Option 4 ID : 264330598292
Status : Answered
Chosen Option : 4

Q.17 Parts of the following sentence have been given as options. Select the option that contains an error.
Jaya said that she will become topper in her class.

- Ans** 1. in her class
 2. she will become topper
 3. that
 4. Jaya said

Question ID : 264330152821
Option 1 ID : 264330598878
Option 2 ID : 264330598877
Option 3 ID : 264330598876
Option 4 ID : 264330598875
Status : Answered
Chosen Option : 2

Q.18 The following sentence has been split into four segments. Identify the segment that contains a grammatical error.
Some / private banks / pay their employees / good.

- Ans
- 1. private banks
 - 2. Some
 - 3. pay their employees
 - 4. good

Question ID : 264330153180
Option 1 ID : 264330600280
Option 2 ID : 264330600279
Option 3 ID : 264330600281
Option 4 ID : 264330600282
Status : Answered
Chosen Option : 4

Q.19 Select the most appropriate meaning of the given idiom.

Break the ice

- Ans
- 1. To say something that makes strangers uncomfortable
 - 2. To say something that makes people who are meeting for the first time more comfortable
 - 3. To say something that makes people excited for a group project
 - 4. To say something mean to people in a group

Question ID : 264330153072
Option 1 ID : 264330599854
Option 2 ID : 264330599851
Option 3 ID : 264330599853
Option 4 ID : 264330599852
Status : Answered
Chosen Option : 2

Q.20 Select the option that can be used as a one-word substitute for the given phrase.
A poem of lamentation on the death of someone loved and admired.

- Ans
- 1. Soliloquy
 - 2. Elegy
 - 3. Tragedy
 - 4. Epitaph

Question ID : 264330152671
Option 1 ID : 264330598289
Option 2 ID : 264330598290
Option 3 ID : 264330598287
Option 4 ID : 264330598288
Status : Answered
Chosen Option : 2

Comprehension:

In the following passage, some words have been deleted. Read the passage carefully and select the most appropriate option to fill in each blank.

Language is (1)_____ of the most fundamental aspects of human communication and interaction. It allows people from different cultures to connect and (2)_____ ideas. While many individuals grow up learning just one language, there are a variety of reasons why learning a second language can be beneficial. (3)_____, it can improve cognitive abilities, enhance job prospects and facilitate travel and cultural immersion. (4)_____ proficiency in a second language is an invaluable asset for personal growth as well as professional development. Audio-video mediums such as (5)_____ are among the best ways to learn a second language as they allow learners to engage with cultural content.

SubQuestion No : 21

Q.21 Select the most appropriate option to fill in blank number 1.

- Ans 1. three
 2. four
 3. two
 4. one

Question ID : 264330153414

Option 1 ID : 264330601190

Option 2 ID : 264330601187

Option 3 ID : 264330601189

Option 4 ID : 264330601188

Status : Answered

Chosen Option : 4

Comprehension:

In the following passage, some words have been deleted. Read the passage carefully and select the most appropriate option to fill in each blank.

Language is (1)_____ of the most fundamental aspects of human communication and interaction. It allows people from different cultures to connect and (2)_____ ideas. While many individuals grow up learning just one language, there are a variety of reasons why learning a second language can be beneficial. (3)_____, it can improve cognitive abilities, enhance job prospects and facilitate travel and cultural immersion. (4)_____ proficiency in a second language is an invaluable asset for personal growth as well as professional development. Audio-video mediums such as (5)_____ are among the best ways to learn a second language as they allow learners to engage with cultural content.

SubQuestion No : 22

Q.22 Select the most appropriate option to fill in blank number 2.

- Ans 1. sharing
 2. share
 3. shares
 4. shared

Question ID : 264330153415

Option 1 ID : 264330601191

Option 2 ID : 264330601194

Option 3 ID : 264330601193

Option 4 ID : 264330601192

Status : Answered

Chosen Option : 2

Comprehension:

In the following passage, some words have been deleted. Read the passage carefully and select the most appropriate option to fill in each blank.

Language is (1)_____ of the most fundamental aspects of human communication and interaction. It allows people from different cultures to connect and (2)_____ ideas. While many individuals grow up learning just one language, there are a variety of reasons why learning a second language can be beneficial. (3)_____, it can improve cognitive abilities, enhance job prospects and facilitate travel and cultural immersion. (4)_____ proficiency in a second language is an invaluable asset for personal growth as well as professional development. Audio-video mediums such as (5)_____ are among the best ways to learn a second language as they allow learners to engage with cultural content.

SubQuestion No : 23

Q.23 Select the most appropriate option to fill in blank number 3.

- Ans 1. Therefore
 2. As it is
 3. However
 4. For example

Question ID : 264330153416

Option 1 ID : 264330601196

Option 2 ID : 264330601198

Option 3 ID : 264330601195

Option 4 ID : 264330601197

Status : Answered

Chosen Option : 4

Comprehension:

In the following passage, some words have been deleted. Read the passage carefully and select the most appropriate option to fill in each blank.

Language is (1)_____ of the most fundamental aspects of human communication and interaction. It allows people from different cultures to connect and (2)_____ ideas. While many individuals grow up learning just one language, there are a variety of reasons why learning a second language can be beneficial. (3)_____, it can improve cognitive abilities, enhance job prospects and facilitate travel and cultural immersion. (4)_____ proficiency in a second language is an invaluable asset for personal growth as well as professional development. Audio-video mediums such as (5)_____ are among the best ways to learn a second language as they allow learners to engage with cultural content.

SubQuestion No : 24

Q.24 Select the most appropriate option to fill in blank number 4.

- Ans 1. Acquiring
 2. Acquires
 3. Acquire
 4. Acquired

Question ID : 264330153417

Option 1 ID : 264330601199

Option 2 ID : 264330601202

Option 3 ID : 264330601200

Option 4 ID : 264330601201

Status : Answered

Chosen Option : 1

Comprehension:

In the following passage, some words have been deleted. Read the passage carefully and select the most appropriate option to fill in each blank.

Language is (1)_____ of the most fundamental aspects of human communication and interaction. It allows people from different cultures to connect and (2)_____ ideas. While many individuals grow up learning just one language, there are a variety of reasons why learning a second language can be beneficial. (3)_____, it can improve cognitive abilities, enhance job prospects and facilitate travel and cultural immersion. (4)_____ proficiency in a second language is an invaluable asset for personal growth as well as professional development. Audio-video mediums such as (5)_____ are among the best ways to learn a second language as they allow learners to engage with cultural content.

SubQuestion No : 25

Q.25 Select the most appropriate option to fill in blank number 5.

- Ans** 1. podcasts
 2. images
 3. books
 4. films

Question ID : **264330153418**

Option 1 ID : **264330601203**

Option 2 ID : **264330601206**

Option 3 ID : **264330601205**

Option 4 ID : **264330601204**

Status : **Answered**

Chosen Option : **1**