

## SSC MTS 2023 Tier 1 Sept 8 Shift 1 Question Paper with Answers

Roll Number	
Candidate Name	
Exam Date	08/09/2023
Exam Time	9:00 AM - 11:00 AM
Subject	MTS Non Tech Havaladar CBIC and CBN Examination 2023 Extra Time

## Section : Numerical and Mathematical Ability

**Q.1** There are 48 students in a class. Their average weight is 48 kg. When one student leaves the class, the average weight reduces by 200 grams. What is the weight of the student who left the class?

- Ans**
- ✓ 1. 57.4 kg
  - ✗ 2. 54.7 kg
  - ✗ 3. 45.7 kg
  - ✗ 4. 47.5 kg

Question ID : 264330156547

Option 1 ID : 264330613578

Option 2 ID : 264330613576

Option 3 ID : 264330613575

Option 4 ID : 264330613577

Status : Answered

Chosen Option : 2

Q.2 Following marks are obtained by a student in five subjects.

Subjects	Marks (out of 50)
CS	49
History	41
English	49
Science	44
Social Science	47

What is the percentage of marks scored by the student?

- Ans
- 1. 92.5%
  - 2. 45%
  - 3. 93%
  - 4. 92%

Question ID : 264330156537

Option 1 ID : 264330613536

Option 2 ID : 264330613538

Option 3 ID : 264330613537

Option 4 ID : 264330613535

Status : Answered

Chosen Option : 1

Q.3 Simplify:

$$3\frac{2}{7} + 3\frac{2}{11} \times 3\frac{1}{7} \div 4\frac{1}{3}$$

- Ans
- 1.  $7\frac{54}{91}$
  - 2.  $9\frac{54}{91}$
  - 3.  $5\frac{54}{91}$
  - 4.  $3\frac{54}{91}$

Question ID : 264330155721

Option 1 ID : 264330610289

Option 2 ID : 264330610290

Option 3 ID : 264330610288

Option 4 ID : 264330610287

Status : Answered

Chosen Option : 2

**Q.4** A deposited ₹62,500 at the rate of 8% per annum compounded half yearly, then what is the compound interest at the end of two years?

- Ans**
- 1. ₹18,161.12
  - 2. ₹12,171.72
  - 3. ₹10,821.18
  - 4. ₹10,616.16

Question ID : 264330154090

Option 1 ID : 264330603825

Option 2 ID : 264330603826

Option 3 ID : 264330603823

Option 4 ID : 264330603824

Status : Answered

Chosen Option : 1

**Q.5** A man and woman working on alternate days can finish a work in 15 days if the man works on the first day. The same work is finished in 14.5 days if they work on alternate days and if the woman starts on the first day. The work will be finished by a man alone in \_\_\_\_ days.

- Ans**
- 1. 25
  - 2. 21
  - 3. 15
  - 4. 22

Question ID : 264330153816

Option 1 ID : 264330602730

Option 2 ID : 264330602728

Option 3 ID : 264330602727

Option 4 ID : 264330602729

Status : Answered

Chosen Option : 2

**Q.6** If the cost price of 12 mangoes is equal to the selling price of 16 mangoes, then the loss percentage is:

- Ans**
- 1. 25%
  - 2. 4%
  - 3. 20%
  - 4. 33%

Question ID : 264330153871

Option 1 ID : 264330602948

Option 2 ID : 264330602947

Option 3 ID : 264330602949

Option 4 ID : 264330602950

Status : Answered

Chosen Option : 4

**Q.7** A boat covers a distance of 65 km downstream in 5 hours while it takes 13 hours to cover the same distance upstream. What is the speed of the boat in still water?

- Ans**
- 1. 8 km/h
  - 2. 11 km/h
  - 3. 6 km/h
  - 4. 9 km/h

Question ID : 264330154093  
Option 1 ID : 264330603838  
Option 2 ID : 264330603836  
Option 3 ID : 264330603835  
Option 4 ID : 264330603837  
Status : Answered  
Chosen Option : 3

**Q.8** There are two varieties of rice. Variety 1 costs ₹100 per kg and variety 2 costs ₹120 per kg. The vendor mixed both the varieties and sold for ₹121 per kg and gained 10%. Find the ratio of variety 1 to variety 2 rice in the mixture.

- Ans**
- 1. 1 : 1
  - 2. 3 : 1
  - 3. 2 : 1
  - 4. 1 : 3

Question ID : 264330153837  
Option 1 ID : 264330602812  
Option 2 ID : 264330602814  
Option 3 ID : 264330602813  
Option 4 ID : 264330602811  
Status : Answered  
Chosen Option : 4

**Q.9** The average weight of A, B and C is 43 kg. If the average weight of A and B is 40 kg and that of B and C is 41 kg, then the weight (in kg) of B is?

- Ans**
- 1. 41
  - 2. 43
  - 3. 33
  - 4. 37

Question ID : 264330156509  
Option 1 ID : 264330613425  
Option 2 ID : 264330613426  
Option 3 ID : 264330613423  
Option 4 ID : 264330613424  
Status : Answered  
Chosen Option : 1

**Q.10** Vinita obtained an amount of ₹23,340 as simple interest on a certain amount at 15% per annum after 8 years. What was the amount invested by Vinita?

- Ans**
- 1. ₹20,450
  - 2. ₹18,650
  - 3. ₹17,490
  - 4. ₹19,450

Question ID : 264330156187  
 Option 1 ID : 264330612150  
 Option 2 ID : 264330612148  
 Option 3 ID : 264330612147  
 Option 4 ID : 264330612149  
 Status : Answered  
 Chosen Option : 4

**Q.11** The largest three-digit number which gives the same remainder 2 when divided by 3, 5 and 9 is \_\_\_\_\_.

- Ans**
- 1. 980
  - 2. 992
  - 3. 995
  - 4. 990

Question ID : 264330156249  
 Option 1 ID : 264330612398  
 Option 2 ID : 264330612395  
 Option 3 ID : 264330612397  
 Option 4 ID : 264330612396  
 Status : Answered  
 Chosen Option : 2

**Q.12** Consider the sales of a company in the year 2019, 2020, 2021 and 2022 given in the pie chart.



The difference in angles at the centre by sales in 2022 and 2019 is \_\_\_\_\_ degrees.

- Ans**
- 1. 50
  - 2. 80
  - 3. 60
  - 4. 70

Question ID : 264330153822  
 Option 1 ID : 264330602751  
 Option 2 ID : 264330602754  
 Option 3 ID : 264330602752  
 Option 4 ID : 264330602753  
 Status : Answered  
 Chosen Option : 2

**Q.13** A can complete a piece of work in 20 days. B can complete the same work in 36 days. If A and B work together, then the number of days required to complete the work is:

- Ans
- 1.  $10\frac{6}{7}$
  - 2.  $12\frac{6}{7}$
  - 3.  $12\frac{1}{7}$
  - 4.  $10\frac{1}{7}$

Question ID : 264330156492  
Option 1 ID : 264330613355  
Option 2 ID : 264330613358  
Option 3 ID : 264330613356  
Option 4 ID : 264330613357  
Status : Answered  
Chosen Option : 3

**Q.14** What is the fourth proportional to 816, 226, 408?

- Ans
- 1. 108
  - 2. 103
  - 3. 113
  - 4. 117

Question ID : 264330154086  
Option 1 ID : 264330603807  
Option 2 ID : 264330603809  
Option 3 ID : 264330603810  
Option 4 ID : 264330603808  
Status : Answered  
Chosen Option : 1

**Q.15** If the price of a product is decreased by 50%, then increased by 50% and then again increased by 50%, what is the net increase percentage in the price?

- Ans
- 1. 13.5%
  - 2. 11.5%
  - 3. 12.5%
  - 4. 9.5%

Question ID : 264330156516  
Option 1 ID : 264330613453  
Option 2 ID : 264330613451  
Option 3 ID : 264330613454  
Option 4 ID : 264330613452  
Status : Answered  
Chosen Option : 3

**Q.16** The marks scored by a student are directly proportional to the time invested in studies. If the student gets 60 marks when he studies 4 hours a day, then how many hours he should use in his studies daily to get 75 marks?

- Ans
- 1. 4.5
  - 2. 5
  - 3. 5.5
  - 4. 6

Question ID : **264330153810**  
Option 1 ID : **264330602703**  
Option 2 ID : **264330602705**  
Option 3 ID : **264330602704**  
Option 4 ID : **264330602706**  
Status : **Answered**  
Chosen Option : **2**

**Q.17** The distance covered (in km) by a bus in 55 minutes at a speed of 69 km/h is:

- Ans
- 1. 67.75
  - 2. 63.25
  - 3. 65.25
  - 4. 60.75

Question ID : **264330156488**  
Option 1 ID : **264330613341**  
Option 2 ID : **264330613342**  
Option 3 ID : **264330613339**  
Option 4 ID : **264330613340**  
Status : **Answered**  
Chosen Option : **1**

**Q.18** The cost price of an item is ₹4,850. What is the profit percentage (rounded off to 1 decimal place) if it is sold at ₹6,680?

- Ans
- 1. 44.6%
  - 2. 37.7%
  - 3. 39.5%
  - 4. 35.5%

Question ID : **264330163010**  
Option 1 ID : **264330639356**  
Option 2 ID : **264330639358**  
Option 3 ID : **264330639357**  
Option 4 ID : **264330639355**  
Status : **Answered**  
Chosen Option : **2**

**Q.19** The radius of a cone is 10.5 cm and the area of the curved surface is  $396 \text{ cm}^2$ . Find its slant height.

Take  $\pi = \frac{22}{7}$

- Ans**
- 1. 9 cm
  - 2. 11.5 cm
  - 3. 12 cm
  - 4. 8.5 cm

Question ID : **264330156371**  
 Option 1 ID : **264330612884**  
 Option 2 ID : **264330612885**  
 Option 3 ID : **264330612886**  
 Option 4 ID : **264330612883**  
 Status : **Answered**  
 Chosen Option : **2**

**Q.20** Find the volume of a cuboid whose dimensions are 12.2 cm, 16 cm and 8.5 cm.

- Ans**
- 1.  $3072 \text{ cm}^3$
  - 2.  $1659.2 \text{ cm}^3$
  - 3.  $832 \text{ cm}^3$
  - 4.  $1664 \text{ cm}^3$

Question ID : **264330156087**  
 Option 1 ID : **264330611749**  
 Option 2 ID : **264330611748**  
 Option 3 ID : **264330611747**  
 Option 4 ID : **264330611750**  
 Status : **Answered**  
 Chosen Option : **4**

Section : Reasoning Ability and Problem Solving

**Q.1** What should come in place of ? in the given series based on the English alphabetical order?

ICU, FAT, CYS, ZWR, ?

- Ans**
- 1. VTR
  - 2. VST
  - 3. WVS
  - 4. WUQ

Question ID : **264330155778**  
 Option 1 ID : **264330610517**  
 Option 2 ID : **264330610516**  
 Option 3 ID : **264330610515**  
 Option 4 ID : **264330610518**  
 Status : **Answered**  
 Chosen Option : **4**



**Q.2** In a certain code language, 'YOU' is coded as '20' and 'LIP' is coded as '44'. What is the code for 'ROB' in the given code language?

- Ans**  1. 44  
 2. 46  
 3. 41  
 4. 42

Question ID : **264330155820**

Option 1 ID : **264330610683**

Option 2 ID : **264330610684**

Option 3 ID : **264330610686**

Option 4 ID : **264330610685**

Status : **Answered**

Chosen Option : **2**

**Q.3** In the following number-pairs, the second number is obtained by applying certain mathematical operations to the first number. Select the set in which the numbers are related in the same way as are the numbers of the following sets.

(NOTE: Operations should be performed on the whole numbers, without breaking down the numbers into its constituent digits. E.g. 13 – Operations on 13 such as adding / subtracting / multiplying etc. to 13 can be performed. Breaking down 13 into 1 and 3 and then performing mathematical operations on 1 and 3 is not allowed)

7, 13

18, 35

- Ans**  1. 77, 98  
 2. 22, 43  
 3. 32, 64  
 4. 44, 76

Question ID : **264330151624**

Option 1 ID : **264330594126**

Option 2 ID : **264330594123**

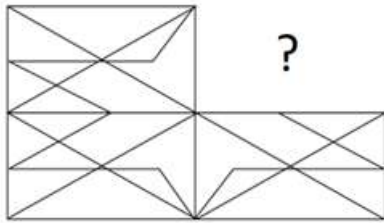
Option 3 ID : **264330594124**

Option 4 ID : **264330594125**

Status : **Answered**

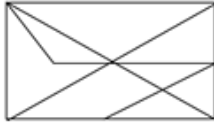
Chosen Option : **2**

Q.4 Identify the figure that completes the pattern (rotation is NOT allowed).



Ans

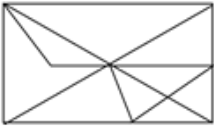
✓ 1.



✗ 2.



✗ 3.



✗ 4.



Question ID : 264330154519

Option 1 ID : 264330605541

Option 2 ID : 264330605540

Option 3 ID : 264330605539

Option 4 ID : 264330605542

Status : Answered

Chosen Option : 1

Q.5 What should come in place of ? in the given series based on the English alphabetical order?

TEO, RCM, PAK, NYI, ?

Ans ✗ 1. KVH

✗ 2. KUH

✗ 3. LVG

✓ 4. LWG

Question ID : 264330155769

Option 1 ID : 264330610481

Option 2 ID : 264330610480

Option 3 ID : 264330610479

Option 4 ID : 264330610482

Status : Answered

Chosen Option : 4

**Q.6** Which figure should replace the question mark (?) if the following figure series were to be continued?

K	R	4	2	
R S A	Q 4 S	2 K A	R S K	?
Q 4 K	A R	S 4	A	

Ans

✗ 1.

A		
G	R	S
2		4

✗ 2.

4		
G	2	A
S		K

✓ 3.

S		
G	4	A
2		K

✗ 4.

4		
G	A	S
2		K

Question ID : 264330154759  
 Option 1 ID : 264330606500  
 Option 2 ID : 264330606501  
 Option 3 ID : 264330606499  
 Option 4 ID : 264330606502  
 Status : Answered  
 Chosen Option : 4

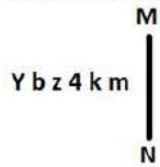
**Q.7** If G means '-'; C means '×'; D means '+'; B means '+', then what will come in place of the question mark (?) in the following equation?

13 C 8 G 45 B 22 D 2 = ?

- Ans
- ✗ 1. 78
  - ✗ 2. 62
  - ✓ 3. 70
  - ✗ 4. 55

Question ID : 264330154682  
 Option 1 ID : 264330606194  
 Option 2 ID : 264330606192  
 Option 3 ID : 264330606193  
 Option 4 ID : 264330606191  
 Status : Answered  
 Chosen Option : 3

**Q.8** Select the correct mirror image of the given figure when the mirror is placed at MN as shown below.



- Ans**
- 1. m k P z q A
  - 2. m k P z b Y
  - 3. w k 4 z d Y
  - 4. m k P z d Y

Question ID : 264330151513

Option 1 ID : 264330593682

Option 2 ID : 264330593681

Option 3 ID : 264330593679

Option 4 ID : 264330593680

Status : Answered

Chosen Option : 4

**Q.9** Select the word-pair that best represents a similar relationship to the one expressed in the pair of words given below.

(The words must be considered as meaningful English words and must not be related to each other based on the number of letters/number of consonants/vowels in the word)

Cricket : Pitch

- Ans**
- 1. Wrestling : Track
  - 2. Ship : Dock
  - 3. Boxing : Ring
  - 4. Boat : Harbour

Question ID : 264330154633

Option 1 ID : 264330605998

Option 2 ID : 264330605995

Option 3 ID : 264330605997

Option 4 ID : 264330605996

Status : Answered

Chosen Option : 3

**Q.10** The position of how many letters will remain unchanged if each of the letter in the word 'POCKET' is arranged in alphabetical order?

- Ans**
- 1. Two
  - 2. Five
  - 3. Three
  - 4. One

Question ID : 264330154322

Option 1 ID : 264330604752

Option 2 ID : 264330604754

Option 3 ID : 264330604753

Option 4 ID : 264330604751

Status : Answered

Chosen Option : 2

Q.11 What should come in place of ? in the given series?

73 75 77 79 81 ?

- Ans  1. 82  
 2. 83  
 3. 85  
 4. 84

Question ID : 264330151540  
Option 1 ID : 264330593787  
Option 2 ID : 264330593788  
Option 3 ID : 264330593790  
Option 4 ID : 264330593789  
Status : Answered  
Chosen Option : 2

Q.12 Seven people, U, M, K, G, B, R and D are sitting in a straight line, facing south. Only two people sit to the left of B. M sits third to the right of G. U is the immediate neighbour of M and B. D sits to the immediate left of K.

Total how many people sit between D and G?

- Ans  1. Two  
 2. Three  
 3. One  
 4. Four

Question ID : 264330161695  
Option 1 ID : 264330634108  
Option 2 ID : 264330634109  
Option 3 ID : 264330634107  
Option 4 ID : 264330634110  
Status : Answered  
Chosen Option : 2

Q.13 What should come in place of ? in the given series based on the English alphabetical order?

GUN, DWM, AYL, XAK, ?

- Ans  1. VCI  
 2. VBH  
 3. UCJ  
 4. UBI

Question ID : 264330155805  
Option 1 ID : 264330610625  
Option 2 ID : 264330610623  
Option 3 ID : 264330610624  
Option 4 ID : 264330610626  
Status : Answered  
Chosen Option : 3

**Q.14** In a certain code language, 'ATOM' is coded as '9613' and 'BOAT' is coded as '1938'. What is the code for 'B' in the given code language?

- Ans
- 1. 9
  - 2. 8
  - 3. 3
  - 4. 1

Question ID : 264330151705

Option 1 ID : 264330594449

Option 2 ID : 264330594448

Option 3 ID : 264330594447

Option 4 ID : 264330594450

Status : Answered

Chosen Option : 2

**Q.15** Read the given statements and conclusions carefully. You have to take the given statements to be true even if they seem to be at variance from commonly known facts. You have to decide which conclusion/s logically follow/s from the given statements.

Statements: All people are tall. Some tall are buildings. No buildings are clocks.

Conclusion I: Some people are buildings.

Conclusion II: No clocks are buildings.

- Ans
- 1. Only conclusion (II) is follow.
  - 2. Neither conclusion (I) nor (II) is follow.
  - 3. Both conclusions (I) and (II) are follow.
  - 4. Only conclusion (I) is follow.

Question ID : 264330155920

Option 1 ID : 264330611084

Option 2 ID : 264330611085

Option 3 ID : 264330611086

Option 4 ID : 264330611083

Status : Answered

Chosen Option : 1

**Q.16** If 'I' stands for '+', 'J' stands for '×', 'K' stands for '÷' and 'L' stands for '-', what will come in place of the question mark (?) in the following equation?  
119 I (7 J 3) L (50 K 5) L 45 = ?

- Ans
- 1. 85
  - 2. 80
  - 3. 75
  - 4. 70

Question ID : 264330151804

Option 1 ID : 264330594844

Option 2 ID : 264330594843

Option 3 ID : 264330594846

Option 4 ID : 264330594845

Status : Answered

Chosen Option : 3

**Q.17** In the following number-pairs, the second number is obtained by applying certain mathematical operations to the first number. Select the set in which the numbers are related in the same way as are the numbers of the following sets.

53, 90

79, 116

(NOTE: Operations should be performed on the whole numbers, without breaking down the numbers into its constituent digits. E.g. 13 – Operations on 13 such as adding / subtracting / multiplying etc. to 13 can be performed. Breaking down 13 into 1 and 3 and then performing mathematical operations on 1 and 3 is not allowed)

**Ans** ✓ 1. 47, 84

✗ 2. 31, 94

✗ 3. 59, 98

✗ 4. 42, 59

Question ID : 264330154501

Option 1 ID : 264330605470

Option 2 ID : 264330605467

Option 3 ID : 264330605469

Option 4 ID : 264330605468

Status : Answered

Chosen Option : 1

**Q.18** What should come in place of '?' in the given series?

11 32 74 158 326 ?

**Ans** ✓ 1. 662

✗ 2. 674

✗ 3. 625

✗ 4. 648

Question ID : 264330151474

Option 1 ID : 264330593525

Option 2 ID : 264330593526

Option 3 ID : 264330593523

Option 4 ID : 264330593524

Status : Answered

Chosen Option : 1

**Q.19** Read the given statements and conclusions carefully. You have to take the given statements to be true even if they seem to be at variance from commonly known facts. You have to decide which conclusion/s logically follow/s from the given statements.

Statements: Some combs are wood. Some wood are tables. Some tables are plastic.

Conclusion I: Some wood are combs.

Conclusion II: All plastic are tables.

**Ans** ✗ 1. Only conclusion (II) is follow.

✗ 2. Both conclusions (I) and (II) are follow.

✓ 3. Only conclusion (I) is follow.

✗ 4. Neither conclusion (I) nor (II) is follow.

Question ID : 264330155901

Option 1 ID : 264330611008

Option 2 ID : 264330611010

Option 3 ID : 264330611007

Option 4 ID : 264330611009

Status : Answered

Chosen Option : 3

Q.20 What should come in place of ? in the given series?

23 28 38 53 73 ?

- Ans
- 1. 95
  - 2. 91
  - 3. 101
  - 4. 98

Question ID : 264330151713  
Option 1 ID : 264330594480  
Option 2 ID : 264330594482  
Option 3 ID : 264330594479  
Option 4 ID : 264330594481  
Status : Answered  
Chosen Option : 4

Section : General Awareness

Q.1 Which Indian Mass Movement began with the famous 'Dandi March' of Mahatma Gandhi?

- Ans
- 1. Civil Disobedience Movement
  - 2. Non-Cooperation Movement
  - 3. Quit India Movement
  - 4. Kheda Movement

Question ID : 264330162326  
Option 1 ID : 264330636633  
Option 2 ID : 264330636632  
Option 3 ID : 264330636631  
Option 4 ID : 264330636634  
Status : Answered  
Chosen Option : 1

Q.2 Whose autobiography is titled 'An Unsuitable Boy'?

- Ans
- 1. Karan Johar
  - 2. Aditya Chopra
  - 3. Hansal Mehta
  - 4. Sanjay Kapoor

Question ID : 264330155448  
Option 1 ID : 264330609197  
Option 2 ID : 264330609195  
Option 3 ID : 264330609196  
Option 4 ID : 264330609198  
Status : Not Answered  
Chosen Option : --



Q.3 The length of the men's kabaddi court is \_\_\_\_ metres.

- Ans  1. 10  
 2. 13  
 3. 17  
 4. 15

Question ID : 264330158245  
Option 1 ID : 264330620339  
Option 2 ID : 264330620340  
Option 3 ID : 264330620342  
Option 4 ID : 264330620341  
Status : Not Answered  
Chosen Option : --

Q.4 Who among the following is the author of the book 'The Zoya factor'?

- Ans  1. Kiran Desai  
 2. Sudha Murty  
 3. Anuja Chauhan  
 4. Nandini Bajpai

Question ID : 264330155458  
Option 1 ID : 264330609235  
Option 2 ID : 264330609236  
Option 3 ID : 264330609238  
Option 4 ID : 264330609237  
Status : Answered  
Chosen Option : 2

Q.5 Who among the following has NOT received the Sangeet Natak Akademi Award-2021 (given in February 2023) for his/her contribution in dance ?

- Ans  1. Neena Prasad  
 2. Sumitra Guha  
 3. Jayalakshmi Eshwar  
 4. Thokchom Ibemubi Devi

Question ID : 264330157837  
Option 1 ID : 264330618708  
Option 2 ID : 264330618710  
Option 3 ID : 264330618707  
Option 4 ID : 264330618709  
Status : Not Answered  
Chosen Option : --

**Q.6** Which of the following is NOT a Directive Principle based on the ideals of Mahatma Gandhi?

- Ans**  1. To promote industrialisation in urban areas  
 2. To organise village Panchayats  
 3. To prohibit intoxicating drinks and drugs that are injurious to health  
 4. To promote cottage industries in rural areas

Question ID : 264330162251  
Option 1 ID : 264330636334  
Option 2 ID : 264330636331  
Option 3 ID : 264330636333  
Option 4 ID : 264330636332  
Status : Answered  
Chosen Option : 3

**Q.7** Which of the following methods is used to calculate national income by summing up the total incomes earned by individuals and businesses in an economy?

- Ans**  1. Value-added method  
 2. Output method  
 3. Income method  
 4. Expenditure method

Question ID : 264330157315  
Option 1 ID : 264330616626  
Option 2 ID : 264330616625  
Option 3 ID : 264330616623  
Option 4 ID : 264330616624  
Status : Answered  
Chosen Option : 2

**Q.8** What is personal income?

- Ans**  1. The income earned by individuals and households after taxes and other deductions  
 2. The total income earned by businesses and corporations in an economy  
 3. The income earned by individuals through their own business or self-employment  
 4. The total income earned by individuals and households before taxes and other deductions

Question ID : 264330157318  
Option 1 ID : 264330616637  
Option 2 ID : 264330616635  
Option 3 ID : 264330616638  
Option 4 ID : 264330616636  
Status : Answered  
Chosen Option : 1

**Q.9** Who founded the Hindu reform organisation Brahmo Samaj?

- Ans**  1. Ramkrishna Paramhans  
 2. Rabindranath Tagore  
 3. Atmaram Pandurang  
 4. Raja Ram Mohan Roy

Question ID : 264330161745  
Option 1 ID : 264330634307  
Option 2 ID : 264330634309  
Option 3 ID : 264330634310  
Option 4 ID : 264330634308  
Status : Answered  
Chosen Option : 4

Q.10 Whom among the following Indian singers is known as 'Gazal King'?

- Ans
- 1. Manna Dey
  - 2. Mukesh
  - 3. Shailendra
  - 4. Jagjit Singh

Question ID : 264330162232  
Option 1 ID : 264330636256  
Option 2 ID : 264330636255  
Option 3 ID : 264330636257  
Option 4 ID : 264330636258  
Status : Answered  
Chosen Option : 3

Q.11 Dree Utsav is celebrated in the state of \_\_\_\_\_.

- Ans
- 1. Arunachal Pradesh
  - 2. Kerala
  - 3. Assam
  - 4. Andhra Pradesh

Question ID : 264330159082  
Option 1 ID : 264330623689  
Option 2 ID : 264330623690  
Option 3 ID : 264330623688  
Option 4 ID : 264330623687  
Status : Answered  
Chosen Option : 1

Q.12 \_\_\_\_\_ word of Indian dance is derived from a Sanskrit word and literally means 'taking towards'.

- Ans
- 1. Nritta
  - 2. Laasya
  - 3. Taandava
  - 4. Abhinaya

Question ID : 264330159047  
Option 1 ID : 264330623549  
Option 2 ID : 264330623547  
Option 3 ID : 264330623550  
Option 4 ID : 264330623548  
Status : Answered  
Chosen Option : 1

Q.13 Which of the following is an example of the Western Coast Port?

- Ans
- 1. Tuticorin Port
  - 2. Paradip Port
  - 3. Mumbai Port
  - 4. Vishakhapatnam Port

Question ID : 264330160139  
Option 1 ID : 264330627897  
Option 2 ID : 264330627896  
Option 3 ID : 264330627898  
Option 4 ID : 264330627895  
Status : Answered  
Chosen Option : 3

Q.14 What are the three tiers of the Government in India?

- Ans
- 1. Union government, Judiciary government and Federal government
  - 2. Union government, State Government and Federal Government
  - 3. Union government, State government and Judiciary government
  - 4. Union Government, State Government and Local Government

Question ID : 264330161290  
Option 1 ID : 264330632488  
Option 2 ID : 264330632490  
Option 3 ID : 264330632487  
Option 4 ID : 264330632489  
Status : Answered  
Chosen Option : 4

Q.15 The foundation of Sanchi Stupa was laid by which of the following Kings?

- Ans
- 1. Samudragupta
  - 2. Bimbisara
  - 3. Ashoka
  - 4. Chandragupta Maurya

Question ID : 264330160758  
Option 1 ID : 264330630365  
Option 2 ID : 264330630363  
Option 3 ID : 264330630366  
Option 4 ID : 264330630364  
Status : Answered  
Chosen Option : 3

Q.16 During which months do retreating monsoons occur in India?

- Ans
- 1. January and February
  - 2. May and June
  - 3. October and November
  - 4. March and April

Question ID : 264330160147  
Option 1 ID : 264330627930  
Option 2 ID : 264330627928  
Option 3 ID : 264330627927  
Option 4 ID : 264330627929  
Status : Answered  
Chosen Option : 3

Q.17 Which is the primary structural component responsible for most of the mechanical strength of the cell wall?

- Ans
- 1. Heparin
  - 2. Glycogen
  - 3. Chitin
  - 4. Cellulose

Question ID : 264330161082  
Option 1 ID : 264330631662  
Option 2 ID : 264330631660  
Option 3 ID : 264330631661  
Option 4 ID : 264330631659  
Status : Answered  
Chosen Option : 4

Q.18 Ball and spring model of chemical bonds obey:

- Ans  1. Hooke's law  
 2. Charles' law  
 3. gravitational law  
 4. Newton's law

Question ID : 264330156586  
Option 1 ID : 264330613734  
Option 2 ID : 264330613732  
Option 3 ID : 264330613731  
Option 4 ID : 264330613733  
Status : Answered  
Chosen Option : 2

Q.19 Pandit Janki Prasad was associated with which of the following Gharanas of Kathak?

- Ans  1. Banaras  
 2. Raigarh  
 3. Jaipur  
 4. Lucknow

Question ID : 264330160809  
Option 1 ID : 264330630569  
Option 2 ID : 264330630570  
Option 3 ID : 264330630567  
Option 4 ID : 264330630568  
Status : Answered  
Chosen Option : 4

Q.20 In 2023, Ajay Singh, the chief of SpiceJet was appointed as president of which of the following?

- Ans  1. FICCI  
 2. ASSOCHAM  
 3. CII  
 4. NASSCOM

Question ID : 264330158348  
Option 1 ID : 264330620751  
Option 2 ID : 264330620752  
Option 3 ID : 264330620753  
Option 4 ID : 264330620754  
Status : Answered  
Chosen Option : 1

Q.21 Rohit Sharma became the first ever Indian to play how many T20 cricket matches in October 2022?

- Ans  1. 300  
 2. 100  
 3. 200  
 4. 400

Question ID : 264330158361  
Option 1 ID : 264330620805  
Option 2 ID : 264330620803  
Option 3 ID : 264330620804  
Option 4 ID : 264330620806  
Status : Answered  
Chosen Option : 1

Q.22 Which form of Indian dance is said to be 'soft and suitable for female presentation'?

- Ans  1. Nritta  
 2. Taandava  
 3. Laasya  
 4. Nritya

Question ID : 264330161891  
Option 1 ID : 264330634892  
Option 2 ID : 264330634893  
Option 3 ID : 264330634894  
Option 4 ID : 264330634891  
Status : Answered  
Chosen Option : 3

Q.23 Which of the following oceans is surrounded by the continent of North America and South America to the east?

- Ans  1. Pacific Ocean  
 2. Atlantic Ocean  
 3. Indian Ocean  
 4. Arctic Ocean

Question ID : 264330161323  
Option 1 ID : 264330632620  
Option 2 ID : 264330632622  
Option 3 ID : 264330632619  
Option 4 ID : 264330632621  
Status : Answered  
Chosen Option : 2

Q.24 The famous 'Pashupatinath Temple' is located in which country from the following?

- Ans  1. Nepal  
 2. Bhutan  
 3. Maldives  
 4. Sri Lanka

Question ID : 264330161561  
Option 1 ID : 264330633574  
Option 2 ID : 264330633571  
Option 3 ID : 264330633573  
Option 4 ID : 264330633572  
Status : Answered  
Chosen Option : 1

Q.25 In which of the following years was the first Janjatiya Khel Mahotsav held?

- Ans  1. 2023  
 2. 2021  
 3. 2020  
 4. 2022

Question ID : 264330161142  
Option 1 ID : 264330631900  
Option 2 ID : 264330631901  
Option 3 ID : 264330631902  
Option 4 ID : 264330631899  
Status : Answered  
Chosen Option : 1

**Q.1** Select the option that can be used as a one-word substitute for the given group of words.

One who does not believe in the existence of God

- Ans
- 1. Atheist
  - 2. Priest
  - 3. Monk
  - 4. Believer

Question ID : 264330153404

Option 1 ID : 264330601152

Option 2 ID : 264330601153

Option 3 ID : 264330601151

Option 4 ID : 264330601154

Status : Answered

Chosen Option : 1

**Q.2** Select the most appropriate option that can rectify the underlined segment in the given sentence. If there is no need to rectify it, select 'no rectification needed'.

You are the beautiful woman I have ever seen.

- Ans
- 1. no rectification needed
  - 2. more beautiful
  - 3. beauty
  - 4. most beautiful

Question ID : 264330153465

Option 1 ID : 264330601378

Option 2 ID : 264330601377

Option 3 ID : 264330601375

Option 4 ID : 264330601376

Status : Answered

Chosen Option : 4

**Q.3** Choose the option which best expresses the meaning of the given idiom.

By fair means or foul

- Ans
- 1. To work without planning
  - 2. To find difficulty in completing some work
  - 3. To get one's way with honesty or dishonesty
  - 4. To provoke someone into quarrelling

Question ID : 264330153347

Option 1 ID : 264330600939

Option 2 ID : 264330600941

Option 3 ID : 264330600940

Option 4 ID : 264330600942

Status : Answered

Chosen Option : 3

**Q.4** The following sentence has been split into four segments. Identify the segment that contains a grammatical error.

My younger daughter, / Kanu prefer / dark chocolate / to yoghurt.

- Ans
- 1. dark chocolate
  - 2. My younger daughter
  - 3. Kanu prefer
  - 4. to yoghurt

Question ID : 264330147603

Option 1 ID : 264330578633

Option 2 ID : 264330578631

Option 3 ID : 264330578632

Option 4 ID : 264330578634

Status : Answered

Chosen Option : 2

**Q.5** Choose the sentence that contains an error.

- Ans
- 1. I saw a movie that was directed by Steven Spielberg.
  - 2. She is the only person who can solve this difficult math problem.
  - 3. He is an lawyer who works for a prestigious law firm.
  - 4. The Great Wall of China is a popular tourist attraction.

Question ID : 264330155179

Option 1 ID : 264330608176

Option 2 ID : 264330608177

Option 3 ID : 264330608178

Option 4 ID : 264330608175

Status : Answered

Chosen Option : 2

**Q.6** Parts of the following sentence have been given as options. Select the option that contains an error.

Ishita will playing Tennis for her favourite team.

- Ans
- 1. will playing
  - 2. Tennis for
  - 3. her favourite team
  - 4. Ishita

Question ID : 264330152816

Option 1 ID : 264330598856

Option 2 ID : 264330598857

Option 3 ID : 264330598858

Option 4 ID : 264330598855

Status : Answered

Chosen Option : 1



**Q.7** Select the most appropriate option that can substitute the underlined segment in the given sentence.

He apologised in her silently before he pushed deeper into her thoughts.

- Ans**
- 1. apologise in her
  - 2. apologised with her
  - 3. apologised of her
  - 4. apologised to her

Question ID : 264330153476  
Option 1 ID : 264330601421  
Option 2 ID : 264330601420  
Option 3 ID : 264330601419  
Option 4 ID : 264330601422  
Status : Answered  
Chosen Option : 4

**Q.8** Select the correctly spelt word.

- Ans**
- 1. Bihavior
  - 2. Behavior
  - 3. Behaviour
  - 4. Behaveor

Question ID : 264330153412  
Option 1 ID : 264330601183  
Option 2 ID : 264330601186  
Option 3 ID : 264330601185  
Option 4 ID : 264330601184  
Status : Answered  
Chosen Option : 3

**Q.9** Select the most appropriate synonym of the given word.  
**Obvious**

- Ans**
- 1. Clear
  - 2. Murky
  - 3. Ambiguous
  - 4. Opaque

Question ID : 264330151825  
Option 1 ID : 264330594930  
Option 2 ID : 264330594928  
Option 3 ID : 264330594929  
Option 4 ID : 264330594927  
Status : Answered  
Chosen Option : 1

**Q.10** Select the most appropriate meaning of the given idiom.  
As phony as a three-dollar bill

- Ans
- 1. Something that is attractive
  - 2. Something that is genuine
  - 3. Something that is disgusting
  - 4. Something that is fake

Question ID : 264330153439  
Option 1 ID : 264330601280  
Option 2 ID : 264330601279  
Option 3 ID : 264330601282  
Option 4 ID : 264330601281  
Status : Answered  
Chosen Option : 1

**Q.11** Select the most appropriate option to fill in the blank.

They are going to give me a lovely present, but I cannot \_\_\_\_ what it will be.

- Ans
- 1. give
  - 2. gist
  - 3. guess
  - 4. guest

Question ID : 264330153496  
Option 1 ID : 264330601502  
Option 2 ID : 264330601501  
Option 3 ID : 264330601500  
Option 4 ID : 264330601499  
Status : Answered  
Chosen Option : 3

**Q.12** Select the INCORRECTLY spelt word.

- Ans
- 1. Important
  - 2. Maintanance
  - 3. Friend
  - 4. Rhythm

Question ID : 264330152643  
Option 1 ID : 264330598177  
Option 2 ID : 264330598176  
Option 3 ID : 264330598178  
Option 4 ID : 264330598175  
Status : Answered  
Chosen Option : 2

**Q.13** Select the most appropriate synonym of the given word.  
**Determined**

- Ans  1. Flexible  
 2. Famous  
 3. Decisive  
 4. Elevated

Question ID : 264330151919  
Option 1 ID : 264330595291  
Option 2 ID : 264330595293  
Option 3 ID : 264330595294  
Option 4 ID : 264330595292  
Status : Not Answered  
Chosen Option : --

**Q.14** Select the most appropriate synonym of the underlined word.  
Ray was cynical about love.

- Ans  1. prolific  
 2. obese  
 3. trusting  
 4. pessimistic

Question ID : 264330153520  
Option 1 ID : 264330601594  
Option 2 ID : 264330601593  
Option 3 ID : 264330601592  
Option 4 ID : 264330601591  
Status : Answered  
Chosen Option : 4

**Q.15** Select the option that rectifies the spelling of the underlined word in the given sentence.

The company sent out a questionaire to its employees to gather feedback on their work environment.

- Ans  1. questioneire  
 2. questionnaire  
 3. questionnire  
 4. questionaiare

Question ID : 264330153229  
Option 1 ID : 264330600478  
Option 2 ID : 264330600476  
Option 3 ID : 264330600475  
Option 4 ID : 264330600477  
Status : Answered  
Chosen Option : 2

**Q.16** Select the option that can be used as a one-word substitute for the given group of words.

A person who feeds on human flesh

- Ans  1. Cannibal  
 2. Carnivore  
 3. Nudge  
 4. Omnivore

Question ID : 264330153405  
Option 1 ID : 264330601157  
Option 2 ID : 264330601155  
Option 3 ID : 264330601156  
Option 4 ID : 264330601158  
Status : Answered  
Chosen Option : 2

**Q.17** Select the most appropriate option that can substitute the underlined segment in the given sentence. If there is no need to substitute it, select 'No substitution required'.  
Larger emissions of greenhouse gases lead to higher concentrations in the atmosphere.

- Ans  1. leaded to higher concentrations  
 2. have lead to higher concentrations  
 3. is lead to higher concentrations  
 4. No substitution required

Question ID : 264330151898  
Option 1 ID : 264330595207  
Option 2 ID : 264330595208  
Option 3 ID : 264330595209  
Option 4 ID : 264330595210  
Status : Answered  
Chosen Option : 4

**Q.18** Select the most appropriate meaning of the underlined idiom.  
Ramesh always blows his own trumpet.

- Ans  1. praises himself  
 2. criticises himself  
 3. does his own work  
 4. depends on others

Question ID : 264330152752  
Option 1 ID : 264330598607  
Option 2 ID : 264330598608  
Option 3 ID : 264330598609  
Option 4 ID : 264330598610  
Status : Answered  
Chosen Option : 1

**Q.19** Select the most appropriate meaning of the underlined idiom.  
He was on cloud nine when he got admission in Cambridge University.

- Ans  1. involved in useless journey  
 2. very happy  
 3. unsettled  
 4. available to be called to go to work

Question ID : 264330153642  
 Option 1 ID : 264330602042  
 Option 2 ID : 264330602039  
 Option 3 ID : 264330602041  
 Option 4 ID : 264330602040  
 Status : Answered  
 Chosen Option : 2

**Q.20** Select the option that can be used as a one-word substitute for the given group of words.

An examination of a body after death

- Ans  1. Post room  
 2. Post death  
 3. Post partum  
 4. Post mortem

Question ID : 264330152588  
 Option 1 ID : 264330597958  
 Option 2 ID : 264330597956  
 Option 3 ID : 264330597955  
 Option 4 ID : 264330597957  
 Status : Answered  
 Chosen Option : 4

**Comprehension:**

In the following passage some words have been deleted. Fill in the blanks with the help of the alternatives given. Select the most appropriate option for each number.

One of the (1)\_\_\_\_\_ tragedies is seeing someone with incredible talent get (2)\_\_\_\_\_ because he or she lacks some basic skills. This book (3)\_\_\_\_\_ the number one reason executives derail, and it provides extremely helpful tools to operate in a fast-paced, result-oriented environment. I am impressed by how insightful, (4)\_\_\_\_\_, well organised and focused it is. It will surely help one (5)\_\_\_\_\_ several difficult situations.

**SubQuestion No : 21**

**Q.21** Select the most appropriate option to fill in blank number 1.

- Ans  1. more great  
 2. great  
 3. greater  
 4. greatest

Question ID : 264330153590  
 Option 1 ID : 264330601850  
 Option 2 ID : 264330601847  
 Option 3 ID : 264330601848  
 Option 4 ID : 264330601849  
 Status : Answered  
 Chosen Option : 4

**Comprehension:**

In the following passage some words have been deleted. Fill in the blanks with the help of the alternatives given. Select the most appropriate option for each number.

One of the (1)\_\_\_\_\_ tragedies is seeing someone with incredible talent get (2)\_\_\_\_\_ because he or she lacks some basic skills. This book (3)\_\_\_\_\_ the number one reason executives derail, and it provides extremely helpful tools to operate in a fast-paced, result-oriented environment. I am impressed by how insightful, (4)\_\_\_\_\_, well organised and focused it is. It will surely help one (5)\_\_\_\_\_ several difficult situations.

**SubQuestion No : 22**

**Q.22** Select the most appropriate option to fill in blank number 2.

- Ans  1. uplifted  
 2. damaged  
 3. derailed  
 4. channelised

Question ID : 264330153591

Option 1 ID : 264330601852

Option 2 ID : 264330601851

Option 3 ID : 264330601854

Option 4 ID : 264330601853

Status : Answered

Chosen Option : 3

**Comprehension:**

In the following passage some words have been deleted. Fill in the blanks with the help of the alternatives given. Select the most appropriate option for each number.

One of the (1)\_\_\_\_\_ tragedies is seeing someone with incredible talent get (2)\_\_\_\_\_ because he or she lacks some basic skills. This book (3)\_\_\_\_\_ the number one reason executives derail, and it provides extremely helpful tools to operate in a fast-paced, result-oriented environment. I am impressed by how insightful, (4)\_\_\_\_\_, well organised and focused it is. It will surely help one (5)\_\_\_\_\_ several difficult situations.

**SubQuestion No : 23**

**Q.23** Select the most appropriate option to fill in blank number 3.

- Ans  1. demeans  
 2. devours  
 3. addresses  
 4. neglects

Question ID : 264330153592

Option 1 ID : 264330601858

Option 2 ID : 264330601857

Option 3 ID : 264330601855

Option 4 ID : 264330601856

Status : Answered

Chosen Option : 3

**Comprehension:**

In the following passage some words have been deleted. Fill in the blanks with the help of the alternatives given. Select the most appropriate option for each number.

One of the (1)\_\_\_\_\_ tragedies is seeing someone with incredible talent get (2)\_\_\_\_\_ because he or she lacks some basic skills. This book (3)\_\_\_\_\_ the number one reason executives derail, and it provides extremely helpful tools to operate in a fast-paced, result-oriented environment. I am impressed by how insightful, (4)\_\_\_\_\_, well organised and focused it is. It will surely help one (5)\_\_\_\_\_ several difficult situations.

**SubQuestion No : 24**

**Q.24** Select the most appropriate option to fill in blank number 4.

- Ans  1. sophisticated  
 2. pessimistic  
 3. cumbersome  
 4. readable

Question ID : 264330153593

Option 1 ID : 264330601862

Option 2 ID : 264330601861

Option 3 ID : 264330601859

Option 4 ID : 264330601860

Status : Answered

Chosen Option : 2

**Comprehension:**

In the following passage some words have been deleted. Fill in the blanks with the help of the alternatives given. Select the most appropriate option for each number.

One of the (1)\_\_\_\_\_ tragedies is seeing someone with incredible talent get (2)\_\_\_\_\_ because he or she lacks some basic skills. This book (3)\_\_\_\_\_ the number one reason executives derail, and it provides extremely helpful tools to operate in a fast-paced, result-oriented environment. I am impressed by how insightful, (4)\_\_\_\_\_, well organised and focused it is. It will surely help one (5)\_\_\_\_\_ several difficult situations.

**SubQuestion No : 25**

**Q.25** Select the most appropriate option to fill in blank number 5.

- Ans  1. condemn  
 2. salvage  
 3. reject  
 4. discourage

Question ID : 264330153594

Option 1 ID : 264330601866

Option 2 ID : 264330601864

Option 3 ID : 264330601863

Option 4 ID : 264330601865

Status : Answered

Chosen Option : 2

## SSC MTS 2023 Tier 1 Sept 8 Shift 2 Question Paper with Answers

Roll Number	
Candidate Name	
Exam Date	08/09/2023
Exam Time	12:30 PM - 2:30 PM
Subject	MTS Non Tech Havaladar CBIC and CBN Examination 2023

## Section : Numerical and Mathematical Ability

**Q.1** A boat covers a certain distance downstream in 5 hours but takes 8 hours to return upstream to the starting point. If the speed of the stream is 6 km/h, find the speed of the boat in still water.

- Ans**  1. 26 km/h  
 2. 13 km/h  
 3. 78 km/h  
 4. 39 km/h

Question ID : 264330153884  
Option 1 ID : 264330603002  
Option 2 ID : 264330603001  
Option 3 ID : 264330602999  
Option 4 ID : 264330603000  
Status : Answered  
Chosen Option : 1

**Q.2** Three numbers are in the ratio 5 : 2 : 7. The sum of their squares is 3822. The biggest number is:

- Ans**  1. 35  
 2. 38  
 3. 78  
 4. 49

Question ID : 264330154047  
Option 1 ID : 264330603654  
Option 2 ID : 264330603651  
Option 3 ID : 264330603653  
Option 4 ID : 264330603652  
Status : Answered  
Chosen Option : 4



**Q.3** A path of uniform width 2.5 m runs around the outside of a rectangular field of dimensions 45 m × 35 m. What is the area of the path (in  $m^2$ ) ?

- Ans
- 1. 500
  - 2. 425
  - 3. 475
  - 4. 525

Question ID : 264330153787  
Option 1 ID : 264330602612  
Option 2 ID : 264330602613  
Option 3 ID : 264330602614  
Option 4 ID : 264330602611  
Status : Answered  
Chosen Option : 1

**Q.4** In a certain time, a sum becomes 5 times at the rate of 6% per annum on simple interest. At what rate of interest, the same sum becomes 8 times in the same duration?

- Ans
- 1. 8.5%
  - 2. 10.5%
  - 3. 5.5%
  - 4. 12.5%

Question ID : 264330155747  
Option 1 ID : 264330610393  
Option 2 ID : 264330610392  
Option 3 ID : 264330610394  
Option 4 ID : 264330610391  
Status : Answered  
Chosen Option : 2

**Q.5** Find the amount if ₹10,200 is invested at the rate of 8% per annum compound interest for  $1\frac{1}{2}$  years when interest is compounded half yearly (up to two decimal places).

- Ans
- 1. ₹11,743.61
  - 2. ₹11,473.61
  - 3. ₹11,764.28
  - 4. ₹11,347.28

Question ID : 264330156363  
Option 1 ID : 264330612854  
Option 2 ID : 264330612852  
Option 3 ID : 264330612853  
Option 4 ID : 264330612851  
Status : Answered  
Chosen Option : 2

**Q.6** In what ratio, rice costing ₹185 per kg be mixed with rice costing ₹95 per kg such that by selling the mixture at ₹140 per kg there is a gain of 40%?

- Ans**
- 1. 2 : 19
  - 2. 3 : 23
  - 3. 2 : 13
  - 4. 1 : 17

Question ID : 264330154079

Option 1 ID : 264330603779

Option 2 ID : 264330603780

Option 3 ID : 264330603782

Option 4 ID : 264330603781

Status : Answered

Chosen Option : 4

**Q.7** Among four numbers the sum of the smallest and largest is 72 more than the sum of middle two numbers . If the numbers are in the ratio 6 : 7 : 15 : 19, then the smallest number is:

- Ans**
- 1. 72
  - 2. 144
  - 3. 168
  - 4. 216

Question ID : 264330154051

Option 1 ID : 264330603670

Option 2 ID : 264330603669

Option 3 ID : 264330603668

Option 4 ID : 264330603667

Status : Answered

Chosen Option : 3

**Q.8** A man runs across an 1800 m long street in 6 min. Calculate his speed in m/sec.

- Ans**
- 1. 5
  - 2. 4
  - 3. 6
  - 4. 8

Question ID : 264330156111

Option 1 ID : 264330611843

Option 2 ID : 264330611845

Option 3 ID : 264330611844

Option 4 ID : 264330611846

Status : Answered

Chosen Option : 1

**Q.9** The following marks are obtained by a student in five subjects.

Subjects	Marks
Geography	42
History	43
Civics	51
Hindi	54
CS	50

What is the difference between the minimum and maximum marks scored by the student?

- Ans**
- 1. 10
  - 2. 4
  - 3. 2
  - 4. 12

Question ID : 264330156536

Option 1 ID : 264330613533

Option 2 ID : 264330613534

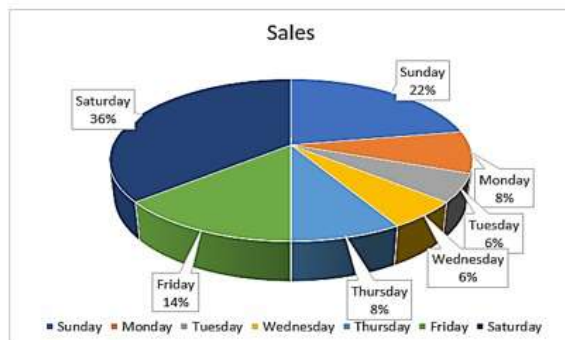
Option 3 ID : 264330613532

Option 4 ID : 264330613531

Status : Answered

Chosen Option : 4

**Q.10** The sale of tickets (in thousands) in days of a week is given in the pie chart:



The combined angle made at the centre by which days is equal to the angle made by Saturday?

- Ans**
- 1. Sunday, Monday and Tuesday
  - 2. Tuesday, Wednesday and Thursday
  - 3. Monday, Tuesday and Wednesday
  - 4. Wednesday, Thursday and Friday

Question ID : 264330153823

Option 1 ID : 264330602758

Option 2 ID : 264330602756

Option 3 ID : 264330602755

Option 4 ID : 264330602757

Status : Answered

Chosen Option : 1

**Q.11** A and B can do a piece of work in 6 and 12 days, respectively. If they work alternately and A begins the work, in how many days will the work be completed?

- Ans  1. 9  
 2. 8  
 3.  $8\frac{1}{2}$   
 4.  $9\frac{1}{2}$

Question ID : 264330153855  
Option 1 ID : 264330602883  
Option 2 ID : 264330602885  
Option 3 ID : 264330602886  
Option 4 ID : 264330602884  
Status : Answered  
Chosen Option : 2

**Q.12** A dealer buys some goods for ₹3,600. If the overhead expenses be 5% of the cost price, then at what price should it be sold to earn 15%?

- Ans  1. ₹4,347  
 2. ₹4,734  
 3. ₹4,437  
 4. ₹4,743

Question ID : 264330159025  
Option 1 ID : 264330623461  
Option 2 ID : 264330623462  
Option 3 ID : 264330623459  
Option 4 ID : 264330623460  
Status : Answered  
Chosen Option : 1

**Q.13** The income of a company increases 25% per annum. If its income is ₹26,64,000 in the year 1999 what was its income in the year 1997?

- Ans  1. ₹ 16,50,000  
 2. ₹ 17,04,960  
 3. ₹ 15,50,000  
 4. ₹ 17,50,000

Question ID : 264330156072  
Option 1 ID : 264330611689  
Option 2 ID : 264330611688  
Option 3 ID : 264330611690  
Option 4 ID : 264330611687  
Status : Answered  
Chosen Option : 2

**Q.14** The average of a batsman in 20 innings is 41 runs. In the next inning, he scored 41 runs. What will be his new average?

- Ans**
- 1. 39
  - 2. 41
  - 3. 38
  - 4. 36

Question ID : 264330156212  
Option 1 ID : 264330612249  
Option 2 ID : 264330612250  
Option 3 ID : 264330612248  
Option 4 ID : 264330612247  
Status : Answered  
Chosen Option : 2

**Q.15** Aisha and Razia can complete a work in 50 days and 75 days, respectively. In how many days will the entire work be completed if both of them work together?

- Ans**
- 1. 32
  - 2. 25
  - 3. 30
  - 4. 28

Question ID : 264330155718  
Option 1 ID : 264330610278  
Option 2 ID : 264330610275  
Option 3 ID : 264330610277  
Option 4 ID : 264330610276  
Status : Answered  
Chosen Option : 3

**Q.16** A man sold his cycle at 17% loss. If he had sold it for ₹1,056 more, he would have made 5% profit. The cost price of the cycle is:

- Ans**
- 1. ₹4,700
  - 2. ₹3,800
  - 3. ₹5,100
  - 4. ₹4,800

Question ID : 264330154080  
Option 1 ID : 264330603784  
Option 2 ID : 264330603783  
Option 3 ID : 264330603785  
Option 4 ID : 264330603786  
Status : Answered  
Chosen Option : 4

Q.17 Find the HCF of 230, 276, and 322.

- Ans
- 1. 23
  - 2. 12
  - 3. 46
  - 4. 14

Question ID : 264330156090  
 Option 1 ID : 264330611759  
 Option 2 ID : 264330611761  
 Option 3 ID : 264330611762  
 Option 4 ID : 264330611760  
 Status : Answered  
 Chosen Option : 3

Q.18 On simplifying the following expression, we get \_\_\_\_\_.

$$\frac{24\sqrt{45} - 16\sqrt{20} + \sqrt{245} - 47\sqrt{5}}{3\frac{1}{5} + 1\frac{2}{5} - 2\frac{1}{6} - 2\frac{1}{5} - 5\frac{2}{5} + 3\frac{1}{6}}$$

- Ans
- 1. 0
  - 2. 3
  - 3. 1
  - 4. 2

Question ID : 264330154114  
 Option 1 ID : 264330603922  
 Option 2 ID : 264330603919  
 Option 3 ID : 264330603921  
 Option 4 ID : 264330603920  
 Status : Answered  
 Chosen Option : 1

Q.19 The speed of a bus from station A to B is 55 km/h, and while coming back from station B to A, the speed of the bus is 95 km/h. The average speed (in km/h) of the bus during the whole journey is:

- Ans
- 1.  $72\frac{1}{3}$
  - 2.  $67\frac{1}{3}$
  - 3.  $62\frac{2}{3}$
  - 4.  $69\frac{2}{3}$

Question ID : 264330156512  
 Option 1 ID : 264330613438  
 Option 2 ID : 264330613435  
 Option 3 ID : 264330613436  
 Option 4 ID : 264330613437  
 Status : Answered  
 Chosen Option : 4

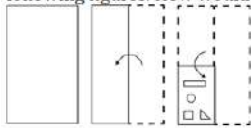
**Q.20** What is the total surface area (in  $\text{cm}^2$ ) of a right circular cone of radius 10.5 cm and slant height 13 cm? Take  $\pi = \frac{22}{7}$

- Ans**
- 1. 577.5
  - 2. 757.5
  - 3. 775.5
  - 4. 787.5

Question ID : **264330153790**  
 Option 1 ID : **264330602625**  
 Option 2 ID : **264330602624**  
 Option 3 ID : **264330602626**  
 Option 4 ID : **264330602623**  
 Status : **Answered**  
 Chosen Option : **3**

Section : Reasoning Ability and Problem Solving

**Q.1** The sequence of folding a piece of paper and the manner in which the folded paper is cut is shown in the following figures. How would this paper look when unfolded?



**Ans**

- 1.
- 2.
- 3.
- 4.

Question ID : **264330155606**  
 Option 1 ID : **264330609830**  
 Option 2 ID : **264330609828**  
 Option 3 ID : **264330609829**  
 Option 4 ID : **264330609827**  
 Status : **Answered**  
 Chosen Option : **3**

**Q.2** In a certain code language, 'YOJ' is coded as 'BRM' and 'DSP' is coded as 'GVS'. What is the code for 'ZMC' in the given code language?

- Ans**
- 1. DQE
  - 2. CPF
  - 3. CQF
  - 4. DPG

Question ID : 264330155832

Option 1 ID : 264330610733

Option 2 ID : 264330610734

Option 3 ID : 264330610732

Option 4 ID : 264330610731

Status : Answered

Chosen Option : 2

**Q.3** Read the given statement(s) and conclusions carefully. Assuming that the information given in the statements is true, even if it appears to be at variance with commonly known facts, decide which of the given conclusions logically follow(s) from the statement(s).

Statements: All the pencils are pens. All the pens are inks.

Conclusions:

(I) All the pencils are inks.

(II) Some inks are pencils.

- Ans**
- 1. Neither conclusion (I) nor (II) is follows.
  - 2. Both conclusions (I) and (II) are follows.
  - 3. Only conclusion (II) is follows.
  - 4. Only conclusion (I) is follows.

Question ID : 264330154427

Option 1 ID : 264330605173

Option 2 ID : 264330605174

Option 3 ID : 264330605172

Option 4 ID : 264330605171

Status : Answered

Chosen Option : 2

**Q.4** If 'A' stands for '+', 'B' stands for '×', 'C' stands for '÷' and 'D' stands for '-', what will come in place of the question mark (?) in the following equation?  
(54 A 9) C 34 D (10 B 3) C 46 D 16 = ?

- Ans**
- 1. 40
  - 2. 32
  - 3. 46
  - 4. 54

Question ID : 264330151793

Option 1 ID : 264330594801

Option 2 ID : 264330594800

Option 3 ID : 264330594799

Option 4 ID : 264330594802

Status : Answered

Chosen Option : 1



**Q.5** Select the word-pair that best represents a similar relationship to the one expressed in the pair of words given below.

(The words must be considered as meaningful English words and must not be related to each other based on the number of letters/number of consonants/vowels in the word)

Correspond : Letters

- Ans**  1. Barter : Commodities  
 2. Trespass : Boundaries  
 3. Arbitrate : Controversies  
 4. Debate : Problems

Question ID : 264330154639  
 Option 1 ID : 264330606022  
 Option 2 ID : 264330606020  
 Option 3 ID : 264330606019  
 Option 4 ID : 264330606021  
 Status : Answered  
 Chosen Option : 2

**Q.6** What should come in place of ? in the given series based on the English alphabetical order?

LVF, IUC, FTZ, CSW, ?

- Ans**  1. ZRT  
 2. ZQW  
 3. YSX  
 4. YQW

Question ID : 264330155790  
 Option 1 ID : 264330610565  
 Option 2 ID : 264330610566  
 Option 3 ID : 264330610563  
 Option 4 ID : 264330610564  
 Status : Answered  
 Chosen Option : 1

**Q.7** What should come in place of '?' in the given series?

2 16 86 436 2186 ?

- Ans**  1. 10578  
 2. 11032  
 3. 11486  
 4. 10936

Question ID : 264330151463  
 Option 1 ID : 264330593479  
 Option 2 ID : 264330593481  
 Option 3 ID : 264330593482  
 Option 4 ID : 264330593480  
 Status : Answered  
 Chosen Option : 4

**Q.8** In a certain code language, 'good vibes only' is coded as 'vn mj kl' and 'change is good' is coded as 'mj ro dh'. How is 'good' coded in the given language?

- Ans**
- 1. ro
  - 2. dh
  - 3. vn
  - 4. mj

Question ID : 264330151688  
Option 1 ID : 264330594382  
Option 2 ID : 264330594381  
Option 3 ID : 264330594380  
Option 4 ID : 264330594379  
Status : Answered  
Chosen Option : 4

**Q.9** What should come in place of ? in the given series based on the English alphabetical order?

JAS, HDV, FGY, DJB, ?

- Ans**
- 1. DNE
  - 2. CNF
  - 3. BME
  - 4. CMG

Question ID : 264330155794  
Option 1 ID : 264330610582  
Option 2 ID : 264330610580  
Option 3 ID : 264330610581  
Option 4 ID : 264330610579  
Status : Answered  
Chosen Option : 3

**Q.10** Which figure should replace the question mark (?) if the following figure series were to be continued?

△	G	S	S	7	B	2	△	7	7	S	G	
	B			△			G			2		?
	7			G			S			△		

Ans

✗ 1.

↑	△	7
	S	
	2	

✗ 2.

↑	7	S
	△	
	G	

✗ 3.

↑	7	S
	△	
	2	

✓ 4.

↑	2	S
	△	
	7	

Question ID : 264330154765

Option 1 ID : 264330606524

Option 2 ID : 264330606523

Option 3 ID : 264330606526

Option 4 ID : 264330606525

Status : Answered

Chosen Option : 4

**Q.11** The position of how many letters will remain unchanged if each of the letter in the word 'DURATION' is arranged in alphabetical order?

- Ans
- ✗ 1. Four
  - ✓ 2. None
  - ✗ 3. Five
  - ✗ 4. One

Question ID : 264330154329

Option 1 ID : 264330604780

Option 2 ID : 264330604781

Option 3 ID : 264330604779

Option 4 ID : 264330604782

Status : Answered

Chosen Option : 2

**Q.12** In the following number-pairs, the second number is obtained by applying certain mathematical operations to the first number. Select the set in which the numbers are related in the same way as are the numbers of the following sets.  
(NOTE : Operations should be performed on the whole numbers, without breaking down the numbers into its constituent digits. E.g. 13 – Operations on 13 such as adding / subtracting / multiplying etc. to 13 can be performed. Breaking down 13 into 1 and 3 and then performing mathematical operations on 1 and 3 is not allowed)  
2, 7  
5, 16

- Ans**
- 1. 14, 45
  - 2. 11, 23
  - 3. 20, 58
  - 4. 15, 46

Question ID : **264330151625**  
 Option 1 ID : **264330594128**  
 Option 2 ID : **264330594127**  
 Option 3 ID : **264330594130**  
 Option 4 ID : **264330594129**  
 Status : **Answered**  
 Chosen Option : **4**

**Q.13** Select the combination of letters that when sequentially placed in the blanks of the given series, will complete the series.  
J \_ K \_ K K J \_ K \_ \_ K

- Ans**
- 1. JJKJK
  - 2. KJKJK
  - 3. JKJKJ
  - 4. KJKJK

Question ID : **264330151645**  
 Option 1 ID : **264330594209**  
 Option 2 ID : **264330594208**  
 Option 3 ID : **264330594210**  
 Option 4 ID : **264330594207**  
 Status : **Answered**  
 Chosen Option : **2**

**Q.14** Read the given statements and conclusions carefully. You have to take the given statements to be true even if they seem to be at variance from commonly known facts. You have to decide which conclusion/s logically follow/s from the given statements.

Statements: Some beds are telephones. All telephones are pillows. Some pillows are cupboards.

Conclusion I: Some pillows are telephones.

Conclusion II: Some beds are pillows.

- Ans**
- 1. Both conclusions (I) and (II) are follow.
  - 2. Only conclusion (I) is follow.
  - 3. Neither conclusion (I) nor (II) is follow.
  - 4. Only conclusion (II) is follow.

Question ID : **264330155914**  
 Option 1 ID : **264330611062**  
 Option 2 ID : **264330611059**  
 Option 3 ID : **264330611061**  
 Option 4 ID : **264330611060**  
 Status : **Answered**  
 Chosen Option : **1**

Q.15 What should come in place of ? in the given series?

37 36 33 32 29 ?

Ans  1. 28

2. 26

3. 27

4. 24

Question ID : 264330151719

Option 1 ID : 264330594506

Option 2 ID : 264330594504

Option 3 ID : 264330594503

Option 4 ID : 264330594505

Status : Answered

Chosen Option : 1

Q.16 16 is related to 29 following a certain logic. Following the same logic, 85 is related to 98. To which of the following is 53 related to, following the same logic?

Ans  1. 66

2. 62

3. 64

4. 68

Question ID : 264330151594

Option 1 ID : 264330594005

Option 2 ID : 264330594003

Option 3 ID : 264330594004

Option 4 ID : 264330594006

Status : Answered

Chosen Option : 1

Q.17 What should come in place of '?' in the given series?

20 54 156 ? 1380 4134 12396

Ans  1. 506

2. 474

3. 358

4. 462

Question ID : 264330151448

Option 1 ID : 264330593422

Option 2 ID : 264330593421

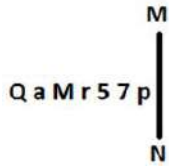
Option 3 ID : 264330593419

Option 4 ID : 264330593420

Status : Answered

Chosen Option : 4

**Q.18** Select the correct mirror image of the given figure when the mirror is placed at MN as shown below.



- Ans
- 1. q 7 2 1 W e Q
  - 2. q 7 5 1 M a Q
  - 3. q 7 5 1 M 6 Q
  - 4. q 7 2 1 M 6 Q

Question ID : 264330151524  
 Option 1 ID : 264330593725  
 Option 2 ID : 264330593724  
 Option 3 ID : 264330593723  
 Option 4 ID : 264330593726  
 Status : Answered  
 Chosen Option : 4

**Q.19** Abeer, Bela, Deepa, Farheen, Heera, and Girish are sitting around a circular table facing the centre. Girish sits 2nd to the right of Deepa. Farheen sits to the immediate left of Girish. Bela sits 2nd to the right of Farheen. Heera is an immediate neighbour of Deepa. Who sits to the immediate right of Bela?

- Ans
- 1. Girish
  - 2. Deepa
  - 3. Heera
  - 4. Abeer

Question ID : 264330155656  
 Option 1 ID : 264330610030  
 Option 2 ID : 264330610027  
 Option 3 ID : 264330610028  
 Option 4 ID : 264330610029  
 Status : Answered  
 Chosen Option : 4

**Q.20** If F means '-', C means '+', D means '÷', A means '×', then what will come in place of the question mark (?) in the following equation?  
 65 A 39 D 3 F 23 C 2 = ?

- Ans
- 1. 64
  - 2. 32
  - 3. 56
  - 4. 42

Question ID : 264330154689  
 Option 1 ID : 264330606222  
 Option 2 ID : 264330606219  
 Option 3 ID : 264330606221  
 Option 4 ID : 264330606220  
 Status : Answered  
 Chosen Option : 2

Q.1 The 11th Fundamental Duty provides opportunities for education for the \_\_\_\_\_ age group of children.

- Ans  1. 6-14  
 2. 5-15  
 3. 2-11  
 4. 6-18

Question ID : 264330159901  
Option 1 ID : 264330626952  
Option 2 ID : 264330626954  
Option 3 ID : 264330626953  
Option 4 ID : 264330626951  
Status : Answered  
Chosen Option : 1

Q.2 As per the Census of India 2011, which Union Territory recorded the lowest population growth rate?

- Ans  1. Lakshadweep  
 2. Delhi  
 3. Daman and Diu  
 4. Chandigarh

Question ID : 264330161553  
Option 1 ID : 264330633540  
Option 2 ID : 264330633541  
Option 3 ID : 264330633539  
Option 4 ID : 264330633542  
Status : Answered  
Chosen Option : 1

Q.3 In which year were the Arms Act and Vernacular Press Act passed?

- Ans  1. 1878  
 2. 1879  
 3. 1877  
 4. 1876

Question ID : 264330160876  
Option 1 ID : 264330630837  
Option 2 ID : 264330630838  
Option 3 ID : 264330630836  
Option 4 ID : 264330630835  
Status : Answered  
Chosen Option : 4

Q.4 In which state of India is Kaziranga National Park located?

- Ans  1. Assam  
 2. Gujarat  
 3. Karnataka  
 4. West Bengal

Question ID : 264330161497  
Option 1 ID : 264330633315  
Option 2 ID : 264330633317  
Option 3 ID : 264330633316  
Option 4 ID : 264330633318  
Status : Answered  
Chosen Option : 1

Q.5 Whose autobiography is titled 'Ace against Odds'?

- Ans  1. Sania Mirza  
 2. Saina Nehwal  
 3. Mirabai Chanu  
 4. Mary Kom

Question ID : 264330155450  
Option 1 ID : 264330609205  
Option 2 ID : 264330609204  
Option 3 ID : 264330609206  
Option 4 ID : 264330609203  
Status : Answered  
Chosen Option : 1

Q.6 By what name are the flat membrane-enclosed sacs present in the Golgi apparatus known?

- Ans  1. Lamellae  
 2. Cisternae  
 3. Cristae  
 4. Stroma

Question ID : 264330161083  
Option 1 ID : 264330631663  
Option 2 ID : 264330631664  
Option 3 ID : 264330631665  
Option 4 ID : 264330631666  
Status : Answered  
Chosen Option : 2

Q.7 The Swarna Jayanti Shahari Rojgar Yojana (SJSRY) was launched in the year \_\_\_\_\_ by Government of India.

- Ans  1. 1990  
 2. 1997  
 3. 2010  
 4. 2004

Question ID : 264330161574  
Option 1 ID : 264330633623  
Option 2 ID : 264330633624  
Option 3 ID : 264330633626  
Option 4 ID : 264330633625  
Status : Answered  
Chosen Option : 4



Q.8 Manna Dey was a famous personality of India in the field of \_\_\_\_\_.

- Ans
- 1. Science
  - 2. Games
  - 3. Politics
  - 4. Music

Question ID : 264330155512  
Option 1 ID : 264330609453  
Option 2 ID : 264330609454  
Option 3 ID : 264330609452  
Option 4 ID : 264330609451  
Status : Answered  
Chosen Option : 4

Q.9 'Chapchar Kut' is a festival from the state of \_\_\_\_\_. It is celebrated during March after the completion of the most arduous task of Jhum operation i.e., jungle clearing (clearing of the remnants of burning).

- Ans
- 1. Mizoram
  - 2. Nagaland
  - 3. Jharkhand
  - 4. Chhattisgarh

Question ID : 264330160822  
Option 1 ID : 264330630622  
Option 2 ID : 264330630619  
Option 3 ID : 264330630620  
Option 4 ID : 264330630621  
Status : Not Answered  
Chosen Option : --

Q.10 In which event at the 2023 ISSF Junior World Cup Championships did Amanpreet Singh win a gold medal for India?

- Ans
- 1. Men's 10 m air rifle
  - 2. Men's 10 m air pistol team
  - 3. Men's 25 m pistol
  - 4. Men's 25 m rapid fire pistol

Question ID : 264330161141  
Option 1 ID : 264330631896  
Option 2 ID : 264330631898  
Option 3 ID : 264330631895  
Option 4 ID : 264330631897  
Status : Answered  
Chosen Option : 3

Q.11 In which of the following States was the 2023 World Squash Championship held?

- Ans  1. Kerala  
 2. Tamil Nadu  
 3. Odisha  
 4. Karnataka

Question ID : 264330161143  
Option 1 ID : 264330631906  
Option 2 ID : 264330631905  
Option 3 ID : 264330631904  
Option 4 ID : 264330631903  
Status : Answered  
Chosen Option : 4

Q.12 Mumtaz Khan was named 'FIH Women's Rising Star of the Year' in 2022. She plays which of the following sports?

- Ans  1. Hockey  
 2. Fencing  
 3. Football  
 4. High Jump

Question ID : 264330158360  
Option 1 ID : 264330620800  
Option 2 ID : 264330620802  
Option 3 ID : 264330620799  
Option 4 ID : 264330620801  
Status : Answered  
Chosen Option : 2

Q.13 Which of the following is a common financial service provided by Micro Finance Institutions?

- Ans  1. Mortgage loans for luxury homes  
 2. Investment advisory services for high-net-worth individuals  
 3. Credit card issuance  
 4. Small loans to low-income individuals for entrepreneurial activities

Question ID : 264330157286  
Option 1 ID : 264330616508  
Option 2 ID : 264330616510  
Option 3 ID : 264330616507  
Option 4 ID : 264330616509  
Status : Answered  
Chosen Option : 4

Q.14 The Rathwas, who dwell in the state of \_\_\_\_\_, perform the Rathwa dance on the occasion of Holi (festival of colours).

- Ans  1. Andhra Pradesh  
 2. Telangana  
 3. Maharashtra  
 4. Gujarat

Question ID : 264330160800  
Option 1 ID : 264330630532  
Option 2 ID : 264330630534  
Option 3 ID : 264330630531  
Option 4 ID : 264330630533  
Status : Answered  
Chosen Option : 2

Q.15 Which Article of the Constitution of India provides for a governor for each state?

- Ans  1. Article 173  
 2. Article 157  
 3. Article 153  
 4. Article 156

Question ID : 264330161294  
Option 1 ID : 264330632506  
Option 2 ID : 264330632505  
Option 3 ID : 264330632503  
Option 4 ID : 264330632504  
Status : Answered  
Chosen Option : 2

Q.16 Who was the first Woman President of Indian National Congress?

- Ans  1. Sarojini Naidu  
 2. Asaf Ali  
 3. Annie Besant  
 4. Usha Mehta

Question ID : 264330162342  
Option 1 ID : 264330636695  
Option 2 ID : 264330636697  
Option 3 ID : 264330636698  
Option 4 ID : 264330636696  
Status : Answered  
Chosen Option : 3

Q.17 \_\_\_\_\_ was a star of the Kathak dance form described as 'Nritya Samragini' (the empress of dance) by Rabindranath Tagore.

- Ans  1. Sitara Devi  
 2. Rukmini Devi Arundale  
 3. Mrinalini Sarabhai  
 4. Mallika Sarabhai

Question ID : 264330160811  
Option 1 ID : 264330630577  
Option 2 ID : 264330630575  
Option 3 ID : 264330630578  
Option 4 ID : 264330630576  
Status : Answered  
Chosen Option : 4

Q.18 Which of the following methods is used to calculate national income by summing up the total spending on final goods and services in an economy?

- Ans  1. Value-added method  
 2. Output method  
 3. Expenditure method  
 4. Income method

Question ID : 264330157316  
Option 1 ID : 264330616630  
Option 2 ID : 264330616629  
Option 3 ID : 264330616628  
Option 4 ID : 264330616627  
Status : Answered  
Chosen Option : 3

Q.19 Former Governor of Jharkhand from the year 2004 to 2009, \_\_\_\_\_, passed away in Lucknow in 2022.

- Ans
- 1. Ramesh Bais
  - 2. Syed Ahmed
  - 3. Syed Sibtey Razi
  - 4. Kateekal Sankaranarayanan

Question ID : 264330161405  
Option 1 ID : 264330632950  
Option 2 ID : 264330632949  
Option 3 ID : 264330632948  
Option 4 ID : 264330632947  
Status : Answered  
Chosen Option : 2

Q.20 According to the IUPAC nomenclature system, which functional group is characterised by the presence of a -OH group, usually in a water-like bent shape?

- Ans
- 1. Carbonyls
  - 2. Amines
  - 3. Alcohols
  - 4. Esters

Question ID : 264330161051  
Option 1 ID : 264330631536  
Option 2 ID : 264330631538  
Option 3 ID : 264330631535  
Option 4 ID : 264330631537  
Status : Answered  
Chosen Option : 1

Q.21 Ajmer Sharif is the shrine of which of the following Sufi saints?

- Ans
- 1. Mohammad Ghori
  - 2. Mohammad Bin Tughlaq
  - 3. Khwaja Moinuddin Chishti
  - 4. Bhaktiyar Khilji

Question ID : 264330160765  
Option 1 ID : 264330630394  
Option 2 ID : 264330630391  
Option 3 ID : 264330630393  
Option 4 ID : 264330630392  
Status : Answered  
Chosen Option : 3

Q.22 Whose autobiography is titled as 'Wings of Fire: An Autobiography'?

- Ans
- 1. E Sreedharan
  - 2. APJ Abdul Kalam
  - 3. Rajender Singh
  - 4. Satyabhama Das Biju

Question ID : 264330155446  
Option 1 ID : 264330609188  
Option 2 ID : 264330609187  
Option 3 ID : 264330609189  
Option 4 ID : 264330609190  
Status : Answered  
Chosen Option : 2

Q.23 Which of the following Carnatic musicians was the first to receive the Bharat Ratna?

- Ans
- 1. Tyagaraja
  - 2. MS Subbulakshmi
  - 3. Syama Sastri
  - 4. KJ Yesudas

Question ID : 264330161767  
Option 1 ID : 264330634398  
Option 2 ID : 264330634395  
Option 3 ID : 264330634397  
Option 4 ID : 264330634396  
Status : Answered  
Chosen Option : 2

Q.24 Which of the following is the highest navigable lake in the world?

- Ans
- 1. Huron
  - 2. Titicaca
  - 3. Superior
  - 4. Como

Question ID : 264330161324  
Option 1 ID : 264330632625  
Option 2 ID : 264330632624  
Option 3 ID : 264330632623  
Option 4 ID : 264330632626  
Status : Answered  
Chosen Option : 2

Q.25 Rukmini Devi Arundale was associated with which Indian classical dance form?

- Ans
- 1. Manipuri
  - 2. Kathak
  - 3. Bharatanatyam
  - 4. Mohiniyattam

Question ID : 264330155520  
Option 1 ID : 264330609485  
Option 2 ID : 264330609486  
Option 3 ID : 264330609483  
Option 4 ID : 264330609484  
Status : Answered  
Chosen Option : 3

Section : English Language and Comprehension

Q.1 Select the option that rectifies the spelling of the underlined word in the given sentence.

He felt priviledged to have received the country's greatest honour.

- Ans
- 1. previllaged
  - 2. privileged
  - 3. privilegede
  - 4. privilaged

Question ID : 264330153225  
Option 1 ID : 264330600460  
Option 2 ID : 264330600461  
Option 3 ID : 264330600459  
Option 4 ID : 264330600462  
Status : Answered  
Chosen Option : 2

Q.2 Select the option that can be used as a one-word substitute for the underlined segment in the following sentence.

Hundreds of people were removed from a place by the government recently due to a war-like situation.

- Ans
- 1. assassinated
  - 2. evacuated
  - 3. invaded
  - 4. terminated

Question ID : 264330152716  
Option 1 ID : 264330598466  
Option 2 ID : 264330598464  
Option 3 ID : 264330598465  
Option 4 ID : 264330598463  
Status : Answered  
Chosen Option : 2

**Q.3** Select the most appropriate meaning of the underlined idiom in the following sentence.

Buying a home in the city centre will cost you an arm and a leg.

- Ans  1. Nothing extra  
 2. A large amount of money  
 3. A small amount of money  
 4. Physical pain

Question ID : 264330153048  
Option 1 ID : 264330599762  
Option 2 ID : 264330599760  
Option 3 ID : 264330599759  
Option 4 ID : 264330599761  
Status : Answered  
Chosen Option : 2

**Q.4** Select the option that can be used as a one-word substitute for the given group of words.

One who has love for mankind

OR

One who makes an active effort to promote human welfare

- Ans  1. Philosopher  
 2. Patriot  
 3. Autocrat  
 4. Philanthropist

Question ID : 264330153554  
Option 1 ID : 264330601716  
Option 2 ID : 264330601717  
Option 3 ID : 264330601718  
Option 4 ID : 264330601715  
Status : Answered  
Chosen Option : 4

**Q.5** Select the most appropriate meaning of the given idiom.  
From scratch

- Ans  1. From a skin disease  
 2. From the beginning  
 3. From utter disorder  
 4. From death

Question ID : 264330156173  
Option 1 ID : 264330612091  
Option 2 ID : 264330612094  
Option 3 ID : 264330612092  
Option 4 ID : 264330612093  
Status : Answered  
Chosen Option : 2

**Q.6** The following sentence has been divided into four parts. Identify the part that contains an error.

(A) Four divided by / (B) two is coming / (C) out to / (D) be two.

- Ans
- 1. D
  - 2. C
  - 3. B
  - 4. A

Question ID : 264330152628  
Option 1 ID : 264330598118  
Option 2 ID : 264330598117  
Option 3 ID : 264330598116  
Option 4 ID : 264330598115  
Status : Answered  
Chosen Option : 3

**Q.7** Select the most appropriate meaning of the underlined idiom.

The detective went the whole nine yards in his investigation.

- Ans
- 1. Measuring every step
  - 2. Everything, all the way
  - 3. Close affinity with the law
  - 4. Taking the distant call

Question ID : 264330153147  
Option 1 ID : 264330600148  
Option 2 ID : 264330600150  
Option 3 ID : 264330600149  
Option 4 ID : 264330600147  
Status : Answered  
Chosen Option : 2

**Q.8** Select the most appropriate option to fill in the blank.

Many soldiers marched in \_\_\_\_\_ at the international border.

- Ans
- 1. dress
  - 2. uniform
  - 3. fabric
  - 4. clothes

Question ID : 264330152583  
Option 1 ID : 264330597935  
Option 2 ID : 264330597937  
Option 3 ID : 264330597938  
Option 4 ID : 264330597936  
Status : Answered  
Chosen Option : 2



**Q.9** The following sentence has been split into four segments. Identify the segment that contains a grammatical error.

This scripture / has been /translated in / seventy languages.

- Ans
- 1. seventy languages
  - 2. This scripture
  - 3. has been
  - 4. translated in

Question ID : 264330155431  
Option 1 ID : 264330609134  
Option 2 ID : 264330609131  
Option 3 ID : 264330609132  
Option 4 ID : 264330609133  
Status : Answered  
Chosen Option : 4

**Q.10** Select the sentence that has NO spelling errors.

- Ans
- 1. The elderly woman was delighted to receive a bouquet of fragrant flowers from her thoughtful grandson, who had come to visit her at the nursing home
  - 2. The elderly woman was delighted to receive a bouque of fragrant flowers from her thoughtfull grandson, who had come to visit her at the nursing home
  - 3. The elderly woman was delighted to receive a bouque of fregrant flowers from her thoughtful grandson, who had come to visit her at the nursing home
  - 4. The elderly woman was delighed to recive a bouquet of fragrant flowers from her thoughtfull grandson, who had come to visit her at the nursing home

Question ID : 264330152648  
Option 1 ID : 264330598196  
Option 2 ID : 264330598198  
Option 3 ID : 264330598195  
Option 4 ID : 264330598197  
Status : Answered  
Chosen Option : 1

**Q.11** Select the most appropriate option to fill in the blank.

She was known for her \_\_\_\_\_ attention to detail, always making sure everything was perfectly organised and in its proper place.

- Ans
- 1. fastidious
  - 2. scornful
  - 3. tedious
  - 4. exact

Question ID : 264330151863  
Option 1 ID : 264330595073  
Option 2 ID : 264330595072  
Option 3 ID : 264330595071  
Option 4 ID : 264330595074  
Status : Answered  
Chosen Option : 4

Q.12 Select the option that can be used as a one-word substitute for the given group of words.

The killing of a king

- Ans  1. Regicide  
 2. Fratricide  
 3. Sororicide  
 4. Patricide

Question ID : 264330151868  
Option 1 ID : 264330595091  
Option 2 ID : 264330595094  
Option 3 ID : 264330595092  
Option 4 ID : 264330595093  
Status : Answered  
Chosen Option : 1

Q.13 Select the most appropriate option to fill in the blanks.

(Ø = No article)

\_\_\_ doctor suggested doing some eye exercises and wearing \_\_\_ pair of powered glasses.

- Ans  1. A; a  
 2. Ø; a  
 3. A; Ø  
 4. The; a

Question ID : 264330151329  
Option 1 ID : 264330592945  
Option 2 ID : 264330592944  
Option 3 ID : 264330592946  
Option 4 ID : 264330592943  
Status : Answered  
Chosen Option : 1

Q.14 Parts of the following sentence have been given as options. Select the option that contains an error.

They have less books than I have.

- Ans  1. I have  
 2. They have  
 3. than  
 4. less books

Question ID : 264330152802  
Option 1 ID : 264330598802  
Option 2 ID : 264330598799  
Option 3 ID : 264330598801  
Option 4 ID : 264330598800  
Status : Answered  
Chosen Option : 4

**Q.15** Select the most appropriate meaning of the given idiom.  
Into hot water

- Ans
- 1. Not on good terms
  - 2. In favour with
  - 3. Came to nothing
  - 4. Into trouble

Question ID : 264330152574  
Option 1 ID : 264330597899  
Option 2 ID : 264330597901  
Option 3 ID : 264330597902  
Option 4 ID : 264330597900  
Status : Answered  
Chosen Option : 4

**Q.16** Select the most appropriate synonym of the bracketed word in the following sentence to fill in the blank.  
The sun was setting over the mountains, painting the sky with \_\_\_\_\_(energetic) shades of orange and pink.

- Ans
- 1. vibrant
  - 2. reactive
  - 3. faded
  - 4. bright

Question ID : 264330152661  
Option 1 ID : 264330598247  
Option 2 ID : 264330598250  
Option 3 ID : 264330598248  
Option 4 ID : 264330598249  
Status : Answered  
Chosen Option : 1

**Q.17** The following sentence has been split into four segments. Identify the segment that contains an error.  
She was writing / a letter to her grandmother / when the power / gone out.

- Ans
- 1. gone out
  - 2. a letter to her grandmother
  - 3. She was writing
  - 4. when the power

Question ID : 264330155319  
Option 1 ID : 264330608718  
Option 2 ID : 264330608716  
Option 3 ID : 264330608715  
Option 4 ID : 264330608717  
Status : Answered  
Chosen Option : 1

**Q.18** Select the most appropriate ANTONYM of the given word.  
Nonchalant

- Ans  1. Flexible  
 2. Caring  
 3. Marvellous  
 4. Covert

Question ID : 264330153539  
Option 1 ID : 264330601661  
Option 2 ID : 264330601660  
Option 3 ID : 264330601662  
Option 4 ID : 264330601659  
Status : Answered  
Chosen Option : 4

**Q.19** Select the most appropriate synonym of the given word.  
Grief

- Ans  1. Pleasure  
 2. Jollity  
 3. Pain  
 4. Content

Question ID : 264330151821  
Option 1 ID : 264330594911  
Option 2 ID : 264330594914  
Option 3 ID : 264330594912  
Option 4 ID : 264330594913  
Status : Answered  
Chosen Option : 3

**Q.20** There is a spelling error in the given sentence. Select the option that contains the INCORRECTLY spelt word.  
The profesor's niece was planning a pleasant surprise for him.

- Ans  1. profesor  
 2. planning  
 3. pleasant  
 4. niece

Question ID : 264330152835  
Option 1 ID : 264330598931  
Option 2 ID : 264330598933  
Option 3 ID : 264330598934  
Option 4 ID : 264330598932  
Status : Answered  
Chosen Option : 1

**Comprehension:**

In the following passage, some words have been deleted. Read the passage carefully and select the most appropriate option to fill in each blank.

Tim Cook, CEO of Apple who has recently \_\_\_\_\_ (1) India, has some \_\_\_\_\_ (2) for parents: limit the screen time for children. He says: "Kids are born \_\_\_\_\_ (3), they're digital kids now. And it is, I think, important to set some hard rails around it." Various surveys of Indian children show alarming findings. A Saurashtra University survey of \_\_\_\_\_ (4) a thousand children and their parents in Rajkot finds that 92% students prefer playing mobile games over playing outside and 78% students \_\_\_\_\_ (5) to having their phone while having meals. In another survey by Local Circles, nearly 55% of parents admit that their children aged 9-13 have access to a smartphone throughout the day.

**SubQuestion No : 21**

**Q.21** Select the most appropriate option to fill in blank number 1.

- Ans  1. visiting  
 2. visited  
 3. visit  
 4. visits

Question ID : 264330152760

Option 1 ID : 264330598637

Option 2 ID : 264330598636

Option 3 ID : 264330598635

Option 4 ID : 264330598638

Status : Answered

Chosen Option : 2

**Comprehension:**

In the following passage, some words have been deleted. Read the passage carefully and select the most appropriate option to fill in each blank.

Tim Cook, CEO of Apple who has recently \_\_\_\_\_ (1) India, has some \_\_\_\_\_ (2) for parents: limit the screen time for children. He says: "Kids are born \_\_\_\_\_ (3), they're digital kids now. And it is, I think, important to set some hard rails around it." Various surveys of Indian children show alarming findings. A Saurashtra University survey of \_\_\_\_\_ (4) a thousand children and their parents in Rajkot finds that 92% students prefer playing mobile games over playing outside and 78% students \_\_\_\_\_ (5) to having their phone while having meals. In another survey by Local Circles, nearly 55% of parents admit that their children aged 9-13 have access to a smartphone throughout the day.

**SubQuestion No : 22**

**Q.22** Select the most appropriate option to fill in blank number 2.

- Ans  1. suggesting  
 2. advise  
 3. suggest  
 4. advice

Question ID : 264330152761

Option 1 ID : 264330598642

Option 2 ID : 264330598639

Option 3 ID : 264330598641

Option 4 ID : 264330598640

Status : Answered

Chosen Option : 4

**Comprehension:**

In the following passage, some words have been deleted. Read the passage carefully and select the most appropriate option to fill in each blank.

Tim Cook, CEO of Apple who has recently \_\_\_\_\_ (1) India, has some \_\_\_\_\_ (2) for parents: limit the screen time for children. He says: "Kids are born \_\_\_\_\_ (3), they're digital kids now. And it is, I think, important to set some hard rails around it." Various surveys of Indian children show alarming findings. A Saurashtra University survey of \_\_\_\_\_ (4) a thousand children and their parents in Rajkot finds that 92% students prefer playing mobile games over playing outside and 78% students \_\_\_\_\_ (5) to having their phone while having meals. In another survey by Local Circles, nearly 55% of parents admit that their children aged 9-13 have access to a smartphone throughout the day.

**SubQuestion No : 23**

**Q.23** Select the most appropriate option to fill in blank number 3.

- Ans
- 1. digitally
  - 2. digitalise
  - 3. digital
  - 4. digitalised

Question ID : 264330152762

Option 1 ID : 264330598644

Option 2 ID : 264330598645

Option 3 ID : 264330598643

Option 4 ID : 264330598646

Status : Answered

Chosen Option : 4

**Comprehension:**

In the following passage, some words have been deleted. Read the passage carefully and select the most appropriate option to fill in each blank.

Tim Cook, CEO of Apple who has recently \_\_\_\_\_ (1) India, has some \_\_\_\_\_ (2) for parents: limit the screen time for children. He says: "Kids are born \_\_\_\_\_ (3), they're digital kids now. And it is, I think, important to set some hard rails around it." Various surveys of Indian children show alarming findings. A Saurashtra University survey of \_\_\_\_\_ (4) a thousand children and their parents in Rajkot finds that 92% students prefer playing mobile games over playing outside and 78% students \_\_\_\_\_ (5) to having their phone while having meals. In another survey by Local Circles, nearly 55% of parents admit that their children aged 9-13 have access to a smartphone throughout the day.

**SubQuestion No : 24**

**Q.24** Select the most appropriate option to fill in blank number 4.

- Ans
- 1. closer than
  - 2. bigger than
  - 3. above than
  - 4. more than

Question ID : 264330152763

Option 1 ID : 264330598650

Option 2 ID : 264330598649

Option 3 ID : 264330598647

Option 4 ID : 264330598648

Status : Answered

Chosen Option : 4

**Comprehension:**

In the following passage, some words have been deleted. Read the passage carefully and select the most appropriate option to fill in each blank.

Tim Cook, CEO of Apple who has recently \_\_\_\_\_ (1) India, has some \_\_\_\_\_ (2) for parents: limit the screen time for children. He says: "Kids are born \_\_\_\_\_ (3), they're digital kids now. And it is, I think, important to set some hard rails around it." Various surveys of Indian children show alarming findings. A Saurashtra University survey of \_\_\_\_\_ (4) a thousand children and their parents in Rajkot finds that 92% students prefer playing mobile games over playing outside and 78% students \_\_\_\_\_ (5) to having their phone while having meals. In another survey by Local Circles, nearly 55% of parents admit that their children aged 9-13 have access to a smartphone throughout the day.

**SubQuestion No : 25**

**Q.25** Select the most appropriate option to fill in blank number 5.

- Ans  1. habituated  
 2. habituating  
 3. will be habituating  
 4. are habituated

Question ID : 264330152764

Option 1 ID : 264330598653

Option 2 ID : 264330598652

Option 3 ID : 264330598651

Option 4 ID : 264330598654

Status : Answered

Chosen Option : 4

## SSC MTS 2023 Tier 1 Sept 8 Shift 3 Question Paper with Answers

Roll Number	
Candidate Name	
Exam Date	08/09/2023
Exam Time	4:00 PM - 6:00 PM
Subject	MTS Non Tech Havaladar CBIC and CBN Examination 2023

## Section : Numerical and Mathematical Ability

**Q.1** Tea leaves worth ₹108 per kg and ₹120 per kg are mixed with a third variety in the ratio 2 : 3 : 5. If the mixture is worth ₹125 per kg, the price (in ₹, rounded off to the nearest integer) of the third variety of tea leaves per kg will be:

- Ans**
- 1. 130
  - 2. 128
  - 3. 135
  - 4. 133

Question ID : 264330156469

Option 1 ID : 264330613265

Option 2 ID : 264330613264

Option 3 ID : 264330613263

Option 4 ID : 264330613266

Status : Answered

Chosen Option : 3

**Q.2** Rima covers a certain distance by car driving at a speed of 59 km/h and she returns to the starting point riding on a bike with a speed of 43 km/h. Find the average speed (in km/h) for the whole journey. (Rounded off to 2 decimal places)

- Ans**
- 1. 52.25
  - 2. 49.75
  - 3. 42.00
  - 4. 45.37

Question ID : 264330155730

Option 1 ID : 264330610323

Option 2 ID : 264330610324

Option 3 ID : 264330610326

Option 4 ID : 264330610325

Status : Answered

Chosen Option : 2



**Q.3** If 7 men working 8 hours a day for 5 days can complete a work, then how many men are required to complete the same work if they work 10 hours a day for 7 days?

- Ans**
- 1. 6
  - 2. 4
  - 3. 3
  - 4. 5

Question ID : **264330156535**

Option 1 ID : **264330613529**

Option 2 ID : **264330613528**

Option 3 ID : **264330613530**

Option 4 ID : **264330613527**

Status : **Answered**

Chosen Option : **2**

**Q.4** The LCM of  $\frac{1}{6}, \frac{5}{27}, \frac{4}{15}, \frac{8}{3}$  is:

- Ans**
- 1.  $\frac{40}{3}$
  - 2.  $\frac{3}{28}$
  - 3.  $\frac{5}{28}$
  - 4.  $\frac{40}{5}$

Question ID : **264330156205**

Option 1 ID : **264330612221**

Option 2 ID : **264330612220**

Option 3 ID : **264330612219**

Option 4 ID : **264330612222**

Status : **Answered**

Chosen Option : **1**

**Q.5** The mean proportional between 0.8 and 7.2 is:

- Ans**
- 1. 2.4
  - 2. 3.4
  - 3. 4.2
  - 4. 1.2

Question ID : **264330153769**

Option 1 ID : **264330602541**

Option 2 ID : **264330602540**

Option 3 ID : **264330602539**

Option 4 ID : **264330602542**

Status : **Answered**

Chosen Option : **1**

Q.6 The value of  $\frac{3 \div 3 \times 2 - 6 \div 3 + 7}{5 \div 5 \times 6 \div 6 + 3 + 3}$  is equal to:

- Ans
- 1. 1
  - 2.  $\frac{3}{2}$
  - 3.  $1\frac{3}{2}$
  - 4. 2

Question ID : 264330156502

Option 1 ID : 264330613397

Option 2 ID : 264330613395

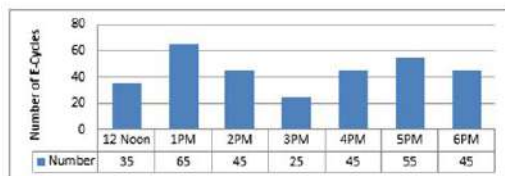
Option 3 ID : 264330613396

Option 4 ID : 264330613398

Status : Answered

Chosen Option : 1

Q.7 The bar diagram represents the number of E- Cycles parking at a metro station from 12:00 P.M. to 6:00 P.M.  
How many times the number of E- Cycles parked is more than average?



- Ans
- 1. 4
  - 2. 5
  - 3. 2
  - 4. 3

Question ID : 264330154064

Option 1 ID : 264330603721

Option 2 ID : 264330603722

Option 3 ID : 264330603719

Option 4 ID : 264330603720

Status : Answered

Chosen Option : 3

Q.8 A can do a piece of work in 10 days and B can do it in 15 days. They work together for 2 days and then A leaves.  
How long will B take to finish the remaining work?

- Ans
- 1. 10 days
  - 2. 22 days
  - 3. 12 days
  - 4. 5 days

Question ID : 264330153885

Option 1 ID : 264330603004

Option 2 ID : 264330603003

Option 3 ID : 264330603006

Option 4 ID : 264330603005

Status : Answered

Chosen Option : 1

**Q.9** A cylinder has a total surface area of  $64\pi$  square units, where the height of the cylinder is equal to its radius. If the height is doubled and the radius is halved, then the total surface area of the new cylinder is \_\_\_\_\_ square units.

- Ans
- 1.  $54\pi$
  - 2.  $40\pi$
  - 3.  $64\pi$
  - 4.  $48\pi$

Question ID : 264330153825

Option 1 ID : 264330602763

Option 2 ID : 264330602764

Option 3 ID : 264330602766

Option 4 ID : 264330602765

Status : Answered

Chosen Option : 2

**Q.10** A boy covers a certain distance between his house and school on a cycle. Having an average speed of 10 km/h, he is late by 10 min. However, with an average speed of 15 km/h, he reaches the school in 5 min. earlier. Find the distance (in km) between his house and school.

- Ans
- 1. 8.5
  - 2. 8
  - 3. 7
  - 4. 7.5

Question ID : 264330156272

Option 1 ID : 264330612490

Option 2 ID : 264330612489

Option 3 ID : 264330612487

Option 4 ID : 264330612488

Status : Answered

Chosen Option : 4

**Q.11** A motorboat can row 12 km/h in still water. If the speed of the current is 2 km/h, it takes 1.5 hours more in covering some distance upstream than it does downstream for covering the same distance. The one-side distance is:

- Ans
- 1. 52.5 km
  - 2. 50 km
  - 3. 51.5 km
  - 4. 53 km

Question ID : 264330156286

Option 1 ID : 264330612545

Option 2 ID : 264330612543

Option 3 ID : 264330612544

Option 4 ID : 264330612546

Status : Answered

Chosen Option : 1

**Q.12** A and B entered a partnership for 5 years. At the start of the business, they invested ₹36,000 and ₹58,000, respectively. At the end of 5 years, their total profit was ₹94,000. What will be the share of B (in ₹) out of this profit?

- Ans**
- 1. 52,000
  - 2. 46,000
  - 3. 58,000
  - 4. 60,000

Question ID : 264330155742  
 Option 1 ID : 264330610372  
 Option 2 ID : 264330610371  
 Option 3 ID : 264330610373  
 Option 4 ID : 264330610374  
 Status : Answered  
 Chosen Option : 3

**Q.13** If the ratio of the principal and the simple interest for 5 years is 10 : 7, then the rate of interest per annum is:

- Ans**
- 1. 18%
  - 2. 16%
  - 3. 12%
  - 4. 14%

Question ID : 264330156523  
 Option 1 ID : 264330613481  
 Option 2 ID : 264330613482  
 Option 3 ID : 264330613479  
 Option 4 ID : 264330613480  
 Status : Answered  
 Chosen Option : 4

**Q.14** The table below shows the earning of different schools (in ₹ crores) in different years. Study the table carefully and answer the question that follows.

School/years	2018	2019	2020	2021	2022
P	50	45	49	56	57
Q	46	48	50	55	62
R	70	65	63	68	63
S	38	47	56	60	69
T	48	37	52	69	77

Find the ratio between the total earnings of schools P and R taken together in year 2020 to the total earnings of schools Q, S and T taken together in the year 2022?

- Ans**
- 1. 7 : 13
  - 2. 7 : 19
  - 3. 12 : 7
  - 4. 12 : 13

Question ID : 264330156573  
 Option 1 ID : 264330613681  
 Option 2 ID : 264330613682  
 Option 3 ID : 264330613679  
 Option 4 ID : 264330613680  
 Status : Answered  
 Chosen Option : 1

**Q.15** A student's marks were incorrectly entered as 44 instead of 86. Due to this, the average of the class got decreased by  $\frac{3}{2}$ . What is the number of students in the class?

- Ans
- 1. 24
  - 2. 28
  - 3. 36
  - 4. 30

Question ID : 264330153757  
Option 1 ID : 264330602491  
Option 2 ID : 264330602494  
Option 3 ID : 264330602492  
Option 4 ID : 264330602493  
Status : Answered  
Chosen Option : 2

**Q.16** The percentage profit earned by selling an article for ₹955 is equal to the percentage loss incurred by selling the same article for ₹845. At what price should the article be sold to make a 6% profit?

- Ans
- 1. ₹955
  - 2. ₹954
  - 3. ₹925
  - 4. ₹1,014

Question ID : 264330159021  
Option 1 ID : 264330623443  
Option 2 ID : 264330623446  
Option 3 ID : 264330623445  
Option 4 ID : 264330623444  
Status : Answered  
Chosen Option : 2

**Q.17** Find the area of a triangle whose base is 7 cm and corresponding height is 82 cm.

- Ans
- 1.  $191 \text{ cm}^2$
  - 2.  $574 \text{ cm}^2$
  - 3.  $143 \text{ cm}^2$
  - 4.  $287 \text{ cm}^2$

Question ID : 264330153892  
Option 1 ID : 264330603033  
Option 2 ID : 264330603031  
Option 3 ID : 264330603034  
Option 4 ID : 264330603032  
Status : Answered  
Chosen Option : 4

**Q.18** The price of a commodity increased from ₹200 to ₹250. What is the percentage increase in price?

- Ans**
- 1. 27%
  - 2. 20%
  - 3. 25%
  - 4. 22%

Question ID : 264330156260

Option 1 ID : 264330612442

Option 2 ID : 264330612439

Option 3 ID : 264330612441

Option 4 ID : 264330612440

Status : Answered

Chosen Option : 3

**Q.19** What will be the compound interest on ₹30,000 at 10% per annum for  $1\frac{1}{2}$  years, when interest is compounded half-yearly?

- Ans**
- 1. ₹4,728.75
  - 2. ₹4,800.75
  - 3. ₹5,728.75
  - 4. ₹4,928.75

Question ID : 264330154132

Option 1 ID : 264330603993

Option 2 ID : 264330603991

Option 3 ID : 264330603992

Option 4 ID : 264330603994

Status : Answered

Chosen Option : 1

**Q.20** Ravi sells a laptop bag to Reeta for ₹1,920 and he sells another similar laptop bag to Vinay for ₹1,280. The percentage profit earned in selling the laptop bag to Reeta is equal to the percentage loss in selling the laptop bag to Vinay. At what price (in ₹) should Ravi sell the laptop bag to make a profit of 25%?

- Ans**
- 1. 1,650
  - 2. 1,600
  - 3. 1,800
  - 4. 2,000

Question ID : 264330155706

Option 1 ID : 264330610228

Option 2 ID : 264330610227

Option 3 ID : 264330610229

Option 4 ID : 264330610230

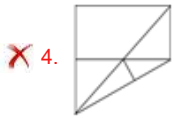
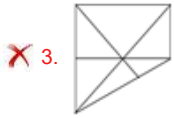
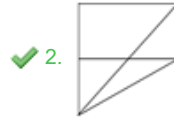
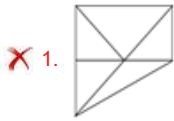
Status : Answered

Chosen Option : 4

Q.1 Identify the figure that completes the pattern (rotation is NOT allowed).



Ans



Question ID : 264330154513

Option 1 ID : 264330605515

Option 2 ID : 264330605517

Option 3 ID : 264330605516

Option 4 ID : 264330605518

Status : Answered

Chosen Option : 2

Q.2 What should come in place of ? in the given series based on the English alphabetical order?

HPS, JRU, LTW, NVY, ?

Ans

1. PXA

2. MXB

3. NYB

4. NZA

Question ID : 264330155765

Option 1 ID : 264330610463

Option 2 ID : 264330610466

Option 3 ID : 264330610464

Option 4 ID : 264330610465

Status : Answered

Chosen Option : 1

**Q.3** What will come in place of '?' in the following equation, if '+' and '×' are interchanged and '-' and '+' are interchanged?

$$16 - 4 + 13 \times 5 + 2 = ?$$

- Ans**
- 1. 36
  - 2. 24
  - 3. 48
  - 4. 55

Question ID : 264330154667

Option 1 ID : 264330606134

Option 2 ID : 264330606133

Option 3 ID : 264330606132

Option 4 ID : 264330606131

Status : Answered

Chosen Option : 4

**Q.4** In a certain code language, 'PORTAL' is coded as 'RQIVCN' and 'QUIET' is coded as 'SWKGV'. What is the code for 'SIMPLE' in the given code language?

- Ans**
- 1. VKNRMJ
  - 2. UKORNG
  - 3. TJNSMH
  - 4. TNOSMI

Question ID : 264330155813

Option 1 ID : 264330610658

Option 2 ID : 264330610655

Option 3 ID : 264330610656

Option 4 ID : 264330610657

Status : Answered

Chosen Option : 2

**Q.5** 17 is related to 52 following a certain logic. Following the same logic, 42 is related to 127. To which of the following is 29 related to, following the same logic?

- Ans**
- 1. 84
  - 2. 88
  - 3. 86
  - 4. 82

Question ID : 264330151591

Option 1 ID : 264330593992

Option 2 ID : 264330593994

Option 3 ID : 264330593993

Option 4 ID : 264330593991

Status : Answered

Chosen Option : 2



Q.6 What should come in place of '?' in the given series?

9 26 77 230 689 ?

- Ans
- 1. 2035
  - 2. 2112
  - 3. 2094
  - 4. 2066

Question ID : 264330151478  
 Option 1 ID : 264330593539  
 Option 2 ID : 264330593542  
 Option 3 ID : 264330593541  
 Option 4 ID : 264330593540  
 Status : Answered  
 Chosen Option : 4

Q.7 Which figure should replace the question mark (?) if the following figure series were to be continued?

R	I	K	2	R	D	7	↑	K	T	7	△	
2	△	D	△	I	T	T	2	△	2	↑	I	?
↑	7	T	K	↑	7	D	R	I	K	D	R	

Ans

1.

R	I	K
D	T	7
△	2	↑

2.

R	D	K
I	△	2
↑	7	T

3.

R	I	K
D	△	7
↑	2	T

4.

R	D	K
I	T	2
△	7	↑

Question ID : 264330154737  
 Option 1 ID : 264330606411  
 Option 2 ID : 264330606412  
 Option 3 ID : 264330606413  
 Option 4 ID : 264330606414  
 Status : Answered  
 Chosen Option : 2

**Q.8** Read the given statements and conclusions carefully. You have to take the given statements to be true even if they seem to be at variance from commonly known facts. You have to decide which conclusion/s logically follow/s from the given statements.

Statements: All stamps are keys. All keys are black. All black are grey.

Conclusion I: All keys are stamps.

Conclusion II: Some keys are black.

- Ans**
- 1. Both conclusions (I) and (II) are follow.
  - 2. Only conclusion (II) is follow.
  - 3. Only conclusion (I) is follow.
  - 4. Neither conclusion (I) nor (II) is follow.

Question ID : 264330155893  
 Option 1 ID : 264330610978  
 Option 2 ID : 264330610976  
 Option 3 ID : 264330610975  
 Option 4 ID : 264330610977  
 Status : Answered  
 Chosen Option : 4

**Q.9** What will come in the place of '?' in the following equation, if '+' and '-' are interchanged and '×' and '÷' are interchanged?

$$17 \div 9 - 39 \div 225 \times 15 = ?$$

- Ans**
- 1. 167
  - 2. 177
  - 3. 157
  - 4. 187

Question ID : 264330155669  
 Option 1 ID : 264330610082  
 Option 2 ID : 264330610081  
 Option 3 ID : 264330610079  
 Option 4 ID : 264330610080  
 Status : Answered  
 Chosen Option : 2

**Q.10** What should come in place of '?' in the given series?

1 14 79 404 2029 ?

- Ans**
- 1. 10154
  - 2. 9848
  - 3. 9812
  - 4. 10132

Question ID : 264330151468  
 Option 1 ID : 264330593502  
 Option 2 ID : 264330593500  
 Option 3 ID : 264330593499  
 Option 4 ID : 264330593501  
 Status : Answered  
 Chosen Option : 1

**Q.11** In a certain code language, 'do it now' is coded as 'qh tr ce' and 'now or never' is coded as 'lx ulk tr'. How is 'now' coded in the given language?

- Ans
- 1. ce
  - 2. qh
  - 3. tr
  - 4. lx

Question ID : 264330151686  
Option 1 ID : 264330594371  
Option 2 ID : 264330594374  
Option 3 ID : 264330594372  
Option 4 ID : 264330594373  
Status : Answered  
Chosen Option : 3

**Q.12** The position of how many letters will remain unchanged if each of the letter in the word 'ABSOLUTE' is arranged in alphabetical order?

- Ans
- 1. Five
  - 2. Two
  - 3. Three
  - 4. Four

Question ID : 264330154323  
Option 1 ID : 264330604758  
Option 2 ID : 264330604755  
Option 3 ID : 264330604757  
Option 4 ID : 264330604756  
Status : Answered  
Chosen Option : 3

**Q.13** Seven people, B, N, M, O, P, Y and S are sitting in a straight line, facing south. Only two people sit between P and S. N is the immediate neighbour of S and M. Only one person sits to the right of P. N sits second to the left of O. Y is an immediate neighbour of P.

Total how many people sit between P and M?

- Ans
- 1. Two
  - 2. Four
  - 3. Three
  - 4. One

Question ID : 264330161697  
Option 1 ID : 264330634116  
Option 2 ID : 264330634118  
Option 3 ID : 264330634117  
Option 4 ID : 264330634115  
Status : Answered  
Chosen Option : 2

**Q.14** Read the given statements and conclusions carefully. You have to take the given statements to be true even if they seem to be at variance from commonly known facts. You have to decide which conclusion/s logically follow/s from the given statements.

Statements: All threads are soft. Some soft are fruit. All fruit is yellow.

Conclusion I: Some thread is fruit.

Conclusion II: Some fruit is yellow.

- Ans**
- 1. Neither conclusion (I) nor (II) is follow.
  - 2. Both conclusions (I) and (II) are follow.
  - 3. Only conclusion (II) is follow.
  - 4. Only conclusion (I) is follow.

Question ID : 264330155921  
 Option 1 ID : 264330611089  
 Option 2 ID : 264330611090  
 Option 3 ID : 264330611088  
 Option 4 ID : 264330611087  
 Status : Answered  
 Chosen Option : 1

**Q.15** What should come in place of ? in the given series?

21 24 29 36 47 ?

- Ans**
- 1. 64
  - 2. 60
  - 3. 56
  - 4. 66

Question ID : 264330151715  
 Option 1 ID : 264330594487  
 Option 2 ID : 264330594490  
 Option 3 ID : 264330594488  
 Option 4 ID : 264330594489  
 Status : Answered  
 Chosen Option : 2

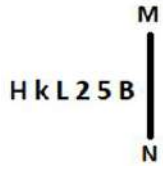
**Q.16** Find out the correct alternative that when filled in the blanks in the same sequence will make the series logically complete.

WA\_XV\_FX\_EFXTGF\_SI\_X

- Ans**
- 1. MNVKD
  - 2. FCUXF
  - 3. FVYNS
  - 4. HKVHU

Question ID : 264330154722  
 Option 1 ID : 264330606353  
 Option 2 ID : 264330606351  
 Option 3 ID : 264330606354  
 Option 4 ID : 264330606352  
 Status : Answered  
 Chosen Option : 2

**Q.17** Select the correct mirror image of the given figure when the mirror is placed at MN as shown below.



- Ans**
- 1. **B 2 L 2 K H**
  - 2. **B K L 2 5 B**
  - 3. **B 5 2 L K H**
  - 4. **5 B 2 L K H**

Question ID : **264330151501**  
 Option 1 ID : **264330593633**  
 Option 2 ID : **264330593631**  
 Option 3 ID : **264330593632**  
 Option 4 ID : **264330593634**  
 Status : **Answered**  
 Chosen Option : **2**

**Q.18** Select the set in which the numbers are related in the same way as are the numbers of the following sets.  
 (NOTE: Operations should be performed on the whole numbers, without breaking down the numbers into its constituent digits. E.g. 13 – Operations on 13 such as adding / subtracting / multiplying etc. to 13 can be performed. Breaking down 13 into 1 and 3 and then performing mathematical operations on 1 and 3 is not allowed)  
 (5, 11, 80)  
 (6, 12 ,90)

- Ans**
- 1. **4, 19, 148**
  - 2. **9, 11, 67**
  - 3. **7, 17, 120**
  - 4. **2, 16, 123**

Question ID : **264330151615**  
 Option 1 ID : **264330594089**  
 Option 2 ID : **264330594090**  
 Option 3 ID : **264330594087**  
 Option 4 ID : **264330594088**  
 Status : **Answered**  
 Chosen Option : **3**

**Q.19** Select the word-pair that best represents a similar relationship to the one expressed in the pair of words given below.  
 (The words must be considered as meaningful English words and must not be related to each other based on the number of letters/number of consonants/vowels in the word)  
 Scissors : Cloth

- Ans**
- 1. **Pen : Ink**
  - 2. **Razor : Beard**
  - 3. **Nail : Hammer**
  - 4. **Furnace : Smoke**

Question ID : **264330154631**  
 Option 1 ID : **264330605987**  
 Option 2 ID : **264330605990**  
 Option 3 ID : **264330605989**  
 Option 4 ID : **264330605988**  
 Status : **Answered**  
 Chosen Option : **2**

**Q.20** Select the combination of letters that when sequentially placed in the blanks of the given series will make it logically complete.

HLO\_ J\_OC LL\_E \_LOG P\_OI

- Ans**
- 1. AONEL
  - 2. ALONL
  - 3. BGHPN
  - 4. BLOEN

Question ID : **264330156321**  
Option 1 ID : **264330612684**  
Option 2 ID : **264330612683**  
Option 3 ID : **264330612685**  
Option 4 ID : **264330612686**  
Status : **Answered**  
Chosen Option : **2**

Section : **General Awareness**

**Q.1** What is the maximum time gap between two sessions of the State Legislature?

- Ans**
- 1. Three months
  - 2. Two months
  - 3. Six months
  - 4. One year

Question ID : **264330159927**  
Option 1 ID : **264330627056**  
Option 2 ID : **264330627055**  
Option 3 ID : **264330627057**  
Option 4 ID : **264330627058**  
Status : **Answered**  
Chosen Option : **3**

**Q.2** In 1951, the first Asian Games was held in which city?

- Ans**
- 1. Jaipur
  - 2. Pune
  - 3. Mumbai
  - 4. New Delhi

Question ID : **264330158228**  
Option 1 ID : **264330620274**  
Option 2 ID : **264330620272**  
Option 3 ID : **264330620273**  
Option 4 ID : **264330620271**  
Status : **Answered**  
Chosen Option : **4**

**Q.3 What is a government budget?**

- Ans**
- 1. A report on the economic growth of a country.
  - 2. A plan for managing personal finances.
  - 3. A financial statement of a government's expected revenue and expenditure for a specific period.
  - 4. A document outlining foreign policy goals.

Question ID : 264330157270  
Option 1 ID : 264330616445  
Option 2 ID : 264330616443  
Option 3 ID : 264330616444  
Option 4 ID : 264330616446  
Status : Answered  
Chosen Option : 3

**Q.4 Who is the author of the novel 'A Suitable Boy'?**

- Ans**
- 1. Kiran Desai
  - 2. Vikram Seth
  - 3. Chetan Bhagat
  - 4. Anita Desai

Question ID : 264330160967  
Option 1 ID : 264330631201  
Option 2 ID : 264330631200  
Option 3 ID : 264330631199  
Option 4 ID : 264330631202  
Status : Answered  
Chosen Option : 2

**Q.5 Which of the following oceans extends into the Mediterranean Sea?**

- Ans**
- 1. Indian Ocean
  - 2. Pacific Ocean
  - 3. Atlantic Ocean
  - 4. Arctic Ocean

Question ID : 264330157834  
Option 1 ID : 264330618695  
Option 2 ID : 264330618698  
Option 3 ID : 264330618696  
Option 4 ID : 264330618697  
Status : Answered  
Chosen Option : 3

**Q.6 What is the meaning of the term 'Collateral' in banking?**

- Ans**
- 1. An investment portfolio
  - 2. A type of credit card
  - 3. A form of digital payment
  - 4. An asset pledged as security for a loan

Question ID : 264330157306  
Option 1 ID : 264330616589  
Option 2 ID : 264330616587  
Option 3 ID : 264330616588  
Option 4 ID : 264330616590  
Status : Answered  
Chosen Option : 4

Q.7 The word 'kathak' is derived from which of the following words?

- Ans  1. Story  
 2. Narrator  
 3. Dance steps  
 4. Bells

Question ID : 264330160787  
Option 1 ID : 264330630479  
Option 2 ID : 264330630480  
Option 3 ID : 264330630481  
Option 4 ID : 264330630482  
Status : Answered  
Chosen Option : 1

Q.8 Which of the following autobiographies was written by Dr. APJ Abdul Kalam, the former president of India?

- Ans  1. One Life is Not Enough  
 2. Waiting for a Visa  
 3. Atmakatha  
 4. Wings of Fire

Question ID : 264330161755  
Option 1 ID : 264330634350  
Option 2 ID : 264330634349  
Option 3 ID : 264330634348  
Option 4 ID : 264330634347  
Status : Answered  
Chosen Option : 4

Q.9 Which Indian musician got the prestigious Academy Award?

- Ans  1. AR Rahman  
 2. Anu Malik  
 3. Naushad  
 4. Bappi Lahiri

Question ID : 264330162233  
Option 1 ID : 264330636262  
Option 2 ID : 264330636260  
Option 3 ID : 264330636261  
Option 4 ID : 264330636259  
Status : Answered  
Chosen Option : 1

Q.10 In relation to the state of Tamil Nadu, the Constitution (Scheduled Tribes) Order (Second Amendment) Act, 2022 will include the \_\_\_\_\_ and Kurivikkaran communities in the list of Scheduled Tribes in Tamil Nadu.

- Ans  1. Narikoravan  
 2. Irular  
 3. Kadar  
 4. Kammara

Question ID : 264330161414  
Option 1 ID : 264330632983  
Option 2 ID : 264330632984  
Option 3 ID : 264330632985  
Option 4 ID : 264330632986  
Status : Answered  
Chosen Option : 1



**Q.11** Which antibiotic is considered the first miracle drug, used to treat throat infections, meningitis, syphilis and other bacterial infections?

- Ans
- 1. Aciclovir
  - 2. Nifuratel
  - 3. Penicillin
  - 4. Metronidazole

Question ID : **264330161078**  
Option 1 ID : **264330631644**  
Option 2 ID : **264330631646**  
Option 3 ID : **264330631643**  
Option 4 ID : **264330631645**  
Status : **Not Answered**  
Chosen Option : --

**Q.12** Which of the following is the Fundamental Law of any country which sets out the framework and the principal functions of various organs of the government?

- Ans
- 1. Customs
  - 2. International Law
  - 3. Constitution
  - 4. Ordinance

Question ID : **264330161395**  
Option 1 ID : **264330632908**  
Option 2 ID : **264330632910**  
Option 3 ID : **264330632907**  
Option 4 ID : **264330632909**  
Status : **Answered**  
Chosen Option : **3**

**Q.13** Who was the singer of the famous song 'Mere Desh Ki Dharti Sona Ugle' from the film 'Upkar' (1967)?

- Ans
- 1. KJ Yesudas
  - 2. Suresh Wadkar
  - 3. Manna Dey
  - 4. Mahendra Kapoor

Question ID : **264330155513**  
Option 1 ID : **264330609457**  
Option 2 ID : **264330609458**  
Option 3 ID : **264330609456**  
Option 4 ID : **264330609455**  
Status : **Answered**  
Chosen Option : **2**

**Q.14** Rani Machaiah was awarded with 'Padam Shri' in the year \_\_\_\_\_ for her contribution to folk dance.

- Ans**
- 1. 2015
  - 2. 2018
  - 3. 2012
  - 4. 2023

Question ID : 264330155526  
Option 1 ID : 264330609509  
Option 2 ID : 264330609508  
Option 3 ID : 264330609510  
Option 4 ID : 264330609507  
Status : Not Answered  
Chosen Option : --

**Q.15** Jyothi Yarraji created a new national record in 2023 in which of the following sports?

- Ans**
- 1. Indoor hurdling
  - 2. High jump
  - 3. Shot put
  - 4. Long jump

Question ID : 264330158373  
Option 1 ID : 264330620854  
Option 2 ID : 264330620853  
Option 3 ID : 264330620852  
Option 4 ID : 264330620851  
Status : Answered  
Chosen Option : 4

**Q.16** Which physicist's experiment during a lecture in 1820 showed the connection between electricity and magnetism?

- Ans**
- 1. John Cockcroft
  - 2. William Gilbert
  - 3. Heinrich Hertz
  - 4. Hans Christian Oersted

Question ID : 264330161045  
Option 1 ID : 264330631512  
Option 2 ID : 264330631511  
Option 3 ID : 264330631514  
Option 4 ID : 264330631513  
Status : Answered  
Chosen Option : 4

Q.17 In the performance of \_\_\_\_\_ dance, on one side raasa dances are performed by women, whereas on the opposite side instrumentalist play the pung choloms (drums) and the karataala (cymbals).

- Ans
- 1. Kathakali
  - 2. Yakshagana
  - 3. Odissi
  - 4. Manipuri

Question ID : 264330161342  
Option 1 ID : 264330632696  
Option 2 ID : 264330632697  
Option 3 ID : 264330632695  
Option 4 ID : 264330632698  
Status : Answered  
Chosen Option : 4

Q.18 Who among the following was the founder of the Khudai Khidmatgars, a powerful non-violent movement among the Pathans of North-West Frontier Province?

- Ans
- 1. Khan Abdul Ghaffar Khan
  - 2. Abdul Qayyum Khan Kashmiri
  - 3. Mohammad Ali Jinnah
  - 4. Khan Abdul Jabbar Khan

Question ID : 264330161749  
Option 1 ID : 264330634323  
Option 2 ID : 264330634326  
Option 3 ID : 264330634325  
Option 4 ID : 264330634324  
Status : Answered  
Chosen Option : 1

Q.19 In which year was the Vernacular Press Act passed?

- Ans
- 1. 1757 CE
  - 2. 1878 CE
  - 3. 1888 CE
  - 4. 1600 CE

Question ID : 264330162318  
Option 1 ID : 264330636600  
Option 2 ID : 264330636602  
Option 3 ID : 264330636601  
Option 4 ID : 264330636599  
Status : Answered  
Chosen Option : 2

Q.20 Which state of India is associated with the famous thunderstorms 'Kaal Baisakhi'?

- Ans
- 1. West Bengal
  - 2. Karnataka
  - 3. Gujarat
  - 4. Haryana

Question ID : 264330161519  
Option 1 ID : 264330633403  
Option 2 ID : 264330633405  
Option 3 ID : 264330633406  
Option 4 ID : 264330633404  
Status : Answered  
Chosen Option : 1

**Q.21** According to Ministry of Commerce and Industry (2018-19), which state of India is the largest producer of Rubber?

- Ans
- 1. Maharashtra
  - 2. Gujarat
  - 3. Kerala
  - 4. Uttar Pradesh

Question ID : 264330161487  
Option 1 ID : 264330633276  
Option 2 ID : 264330633278  
Option 3 ID : 264330633275  
Option 4 ID : 264330633277  
Status : Answered  
Chosen Option : 3

**Q.22** In which year was the first Khelo India Winter Games held?

- Ans
- 1. 2022
  - 2. 2019
  - 3. 2021
  - 4. 2020

Question ID : 264330158238  
Option 1 ID : 264330620314  
Option 2 ID : 264330620311  
Option 3 ID : 264330620313  
Option 4 ID : 264330620312  
Status : Answered  
Chosen Option : 3

**Q.23** 'Losoong' festival, celebrated by the tribal community in \_\_\_\_\_, is usually the time when the farmers rejoice and celebrate their harvest.

- Ans
- 1. Sikkim
  - 2. Jharkhand
  - 3. Odisha
  - 4. West Bengal

Question ID : 264330160818  
Option 1 ID : 264330630603  
Option 2 ID : 264330630606  
Option 3 ID : 264330630605  
Option 4 ID : 264330630604  
Status : Answered  
Chosen Option : 1

**Q.24** According to the Human Development Index 2021, which group of neighbouring countries has ranked behind India?

- Ans
- 1. Maldives and Bhutan
  - 2. Pakistan and Afghanistan
  - 3. Bangladesh and China
  - 4. Sri Lanka and Bhutan

Question ID : 264330160173  
Option 1 ID : 264330628033  
Option 2 ID : 264330628032  
Option 3 ID : 264330628031  
Option 4 ID : 264330628034  
Status : Answered  
Chosen Option : 2

**Q.25** Which of the following statements is true about the Great Bath of the Indus Valley Civilisation?

- Ans**
- 1. It was used for grain storage.
  - 2. It was used for farming.
  - 3. It was used as the water tank of the city.
  - 4. It was probably used for religious purpose.

Question ID : 264330160763  
Option 1 ID : 264330630385  
Option 2 ID : 264330630384  
Option 3 ID : 264330630386  
Option 4 ID : 264330630383  
Status : Answered  
Chosen Option : 3

Section : English Language and Comprehension

**Q.1** Select the most appropriate option that can substitute the underlined segment in the given sentence.

France is a largest country.

- Ans**
- 1. smaller
  - 2. larger
  - 3. smallest
  - 4. large

Question ID : 264330155422  
Option 1 ID : 264330609097  
Option 2 ID : 264330609096  
Option 3 ID : 264330609098  
Option 4 ID : 264330609095  
Status : Answered  
Chosen Option : 4

**Q.2** The following sentence has been split into four segments. Identify the segment that contains an error.

Mr Sharma would have left / the station / by this time / tomorrow.

- Ans**
- 1. tomorrow
  - 2. by this time
  - 3. the station
  - 4. Mr Sharma would have left

Question ID : 264330143051  
Option 1 ID : 264330560482  
Option 2 ID : 264330560481  
Option 3 ID : 264330560480  
Option 4 ID : 264330560479  
Status : Answered  
Chosen Option : 4

**Q.3** Select the most appropriate meaning of the underlined idiom in the following sentence.

“Do not turn a blind eye to all the mischief your child is up to”, the teacher told the young parent.

- Ans**
- 1. Close the door
  - 2. Take pride in
  - 3. Give rewards
  - 4. Pretend not to notice

Question ID : 264330153051  
Option 1 ID : 264330599772  
Option 2 ID : 264330599771  
Option 3 ID : 264330599774  
Option 4 ID : 264330599773  
Status : Answered  
Chosen Option : 4

**Q.4** Select the most appropriate option to fill in the blank.  
The mother \_\_\_\_\_ the chips because they were soggy.

- Ans**
- 1. saved
  - 2. wasted
  - 3. discarded
  - 4. recovered

Question ID : 264330152579  
Option 1 ID : 264330597922  
Option 2 ID : 264330597920  
Option 3 ID : 264330597921  
Option 4 ID : 264330597919  
Status : Answered  
Chosen Option : 3

**Q.5** Identify the most appropriate meaning of the given word.  
Hope

- Ans**
- 1. Caution
  - 2. Realism
  - 3. Cynicism
  - 4. Wish

Question ID : 264330152572  
Option 1 ID : 264330597891  
Option 2 ID : 264330597893  
Option 3 ID : 264330597892  
Option 4 ID : 264330597894  
Status : Answered  
Chosen Option : 4

**Q.6** Select the most appropriate meaning of the given idiom.  
Have egg on your face

- Ans  1. Defeat someone thoroughly
2. To be made to look foolish or embarrassed
3. Making a choice between two unpleasant choices
4. Reveal a secret

Question ID : 264330155282  
Option 1 ID : 264330608571  
Option 2 ID : 264330608573  
Option 3 ID : 264330608574  
Option 4 ID : 264330608572  
Status : Answered  
Chosen Option : 2

**Q.7** The following sentence contains some errors. Select the option that correctly rectifies the error.  
The tiger was tranquilized in the morning and kept in a cage to avoid disturbannces by human beings.

- Ans  1. The tiger was tranquilized in the morning and kept in a cage to avoiid disturbaences by human beings.
2. The tiger was tranquilized in the morning and kept in a cage to avoid disturbances by human beings.
3. The tiger was traanquilized in the morning and kept in a cage to avoid disturbances by human beings.
4. The tiger was tranquiliized in the morning and kept in a cage to avoid disturbances by human beings.

Question ID : 264330152692  
Option 1 ID : 264330598373  
Option 2 ID : 264330598374  
Option 3 ID : 264330598372  
Option 4 ID : 264330598371  
Status : Answered  
Chosen Option : 2

**Q.8** Select the most appropriate synonym of the bracketed word in the following sentence to fill in the blank.  
She's reading a \_\_\_\_\_(secrecy) novel and can't wait to find out who the killer is.

- Ans  1. crisis
2. complication
3. difficulty
4. mystery

Question ID : 264330152660  
Option 1 ID : 264330598246  
Option 2 ID : 264330598245  
Option 3 ID : 264330598243  
Option 4 ID : 264330598244  
Status : Answered  
Chosen Option : 4

**Q.9** The following sentence has been divided into parts. One of them may contain an error. Select the part that contains the error from the given options. If you don't find any error, mark 'No error' as your answer.

The viable of life / depends on a pair / of conflicting realities.

- Ans
- 1. depends on a pair
  - 2. No error
  - 3. The viable of life
  - 4. of conflicting realities

Question ID : 264330153607  
Option 1 ID : 264330601911  
Option 2 ID : 264330601914  
Option 3 ID : 264330601913  
Option 4 ID : 264330601912  
Status : Answered  
Chosen Option : 1

**Q.10** Parts of the following sentence have been given as options. Select the option that contains an error.  
I shall be playing for four hours.

- Ans
- 1. four hours
  - 2. I
  - 3. shall be playing
  - 4. for

Question ID : 264330152818  
Option 1 ID : 264330598866  
Option 2 ID : 264330598863  
Option 3 ID : 264330598864  
Option 4 ID : 264330598865  
Status : Answered  
Chosen Option : 3

**Q.11** Select the most appropriate meaning of the underlined segment in the given sentence.  
Our team is all on the same page when it comes to our goals for the upcoming project.

- Ans
- 1. Be confused
  - 2. Be in agreement
  - 3. Be unsure
  - 4. Be in conflict

Question ID : 264330152927  
Option 1 ID : 264330599289  
Option 2 ID : 264330599287  
Option 3 ID : 264330599290  
Option 4 ID : 264330599288  
Status : Answered  
Chosen Option : 2



**Q.12** Select the most appropriate meaning of the given idiom.  
**Bite the dust**

- Ans**  1. To suffer a defeat  
 2. To fall from a height  
 3. To remain calm  
 4. To fall asleep

Question ID : **264330155285**  
Option 1 ID : **264330608584**  
Option 2 ID : **264330608583**  
Option 3 ID : **264330608586**  
Option 4 ID : **264330608585**  
Status : **Answered**  
Chosen Option : **1**

**Q.13** Select the option that can be used as a one-word substitute for the given group of words.

**A person who avoids sensory pleasures and physical comforts**

- Ans**  1. Frugal  
 2. Epicurean  
 3. Bohemian  
 4. Ascetic

Question ID : **264330151869**  
Option 1 ID : **264330595097**  
Option 2 ID : **264330595098**  
Option 3 ID : **264330595096**  
Option 4 ID : **264330595095**  
Status : **Answered**  
Chosen Option : **4**

**Q.14** Select the **INCORRECTLY** spelt word.

- Ans**  1. Chivalrous  
 2. Expose  
 3. Confess  
 4. Convict

Question ID : **264330152944**  
Option 1 ID : **264330599355**  
Option 2 ID : **264330599356**  
Option 3 ID : **264330599357**  
Option 4 ID : **264330599358**  
Status : **Answered**  
Chosen Option : **3**

**Q.15** Select the option that can be used as a one-word substitute for the given group of words.

A person living in solitude like a saint for religious practices.

- Ans  1. Hermit  
 2. Cretin  
 3. Heir  
 4. Heretic

Question ID : 264330151812  
Option 1 ID : 264330594875  
Option 2 ID : 264330594878  
Option 3 ID : 264330594877  
Option 4 ID : 264330594876  
Status : Answered  
Chosen Option : 1

**Q.16** Select the most appropriate ANTONYM of the given word.  
Clumsy

- Ans  1. Jealous  
 2. Fierce  
 3. Graceful  
 4. Nervous

Question ID : 264330151916  
Option 1 ID : 264330595279  
Option 2 ID : 264330595282  
Option 3 ID : 264330595280  
Option 4 ID : 264330595281  
Status : Answered  
Chosen Option : 3

**Q.17** Select the most appropriate option that can substitute the underlined segment in the given sentence.

No sooner had the sun risen over the horizon when the birds began to chirp and the squirrels started to scamper around the park.

- Ans  1. when the birds begin  
 2. than birds begin  
 3. when birds began  
 4. than the birds began

Question ID : 264330151857  
Option 1 ID : 264330595050  
Option 2 ID : 264330595047  
Option 3 ID : 264330595048  
Option 4 ID : 264330595049  
Status : Answered  
Chosen Option : 4

Q.18 Select the most appropriate option to fill in the blank.

During the meeting, he went on a long and angry \_\_\_\_\_ about how the project was being mismanaged.

- Ans
- 1. shout
  - 2. whisper
  - 3. rant
  - 4. mutter

Question ID : 264330151860  
Option 1 ID : 264330595062  
Option 2 ID : 264330595060  
Option 3 ID : 264330595059  
Option 4 ID : 264330595061  
Status : Answered  
Chosen Option : 3

Q.19 The following sentence has been split into four segments. Identify the segment that contains a grammatical error.

I had / a bad habit of / waking up / lately.

- Ans
- 1. lately
  - 2. waking up
  - 3. a bad habit of
  - 4. I had

Question ID : 264330153185  
Option 1 ID : 264330600302  
Option 2 ID : 264330600301  
Option 3 ID : 264330600300  
Option 4 ID : 264330600299  
Status : Answered  
Chosen Option : 1

Q.20 Select the most appropriate option to fill in the blank.

Chaitnya was \_\_\_\_\_ from the school due to his inappropriate behaviour.

- Ans
- 1. expelled
  - 2. xpelled
  - 3. expeled
  - 4. xpeled

Question ID : 264330153305  
Option 1 ID : 264330600777  
Option 2 ID : 264330600778  
Option 3 ID : 264330600775  
Option 4 ID : 264330600776  
Status : Answered  
Chosen Option : 1

**Comprehension:**

In the following passage, some words have been deleted. Read the passage carefully and select the most appropriate option to fill in each blank.

Once there was a king named Midas who was granted a (1)\_\_\_\_\_ by Dionysus, the god of wine. For his wish, Midas asked that whatever he (2)\_\_\_\_\_ would turn to gold. Despite Dionysus' efforts to prevent it, Midas pleaded that this was a fantastic wish, and so, it was bestowed. Excited about his newly-earned (3)\_\_\_\_\_, Midas started touching all kinds of things, turning each item into pure gold. But soon, Midas became (4)\_\_\_\_\_. As he picked up a piece of food, he found he couldn't eat it. It had turned to gold in his hand. Hungry, Midas groaned, "I'll starve! Perhaps this was not such an excellent wish after all!" Seeing his dismay, Midas' (5)\_\_\_\_\_ daughter threw her arms around him to comfort him, and she, too, turned to gold. "The golden touch is no blessing," Midas cried.

**SubQuestion No : 21**

**Q.21** Select the most appropriate option to fill in blank number 1.

- Ans  1. slavery  
 2. wish  
 3. employment  
 4. job

Question ID : 264330153525

Option 1 ID : 264330601610

Option 2 ID : 264330601609

Option 3 ID : 264330601608

Option 4 ID : 264330601607

Status : Answered

Chosen Option : 2

**Comprehension:**

In the following passage, some words have been deleted. Read the passage carefully and select the most appropriate option to fill in each blank.

Once there was a king named Midas who was granted a (1)\_\_\_\_\_ by Dionysus, the god of wine. For his wish, Midas asked that whatever he (2)\_\_\_\_\_ would turn to gold. Despite Dionysus' efforts to prevent it, Midas pleaded that this was a fantastic wish, and so, it was bestowed. Excited about his newly-earned (3)\_\_\_\_\_, Midas started touching all kinds of things, turning each item into pure gold. But soon, Midas became (4)\_\_\_\_\_. As he picked up a piece of food, he found he couldn't eat it. It had turned to gold in his hand. Hungry, Midas groaned, "I'll starve! Perhaps this was not such an excellent wish after all!" Seeing his dismay, Midas' (5)\_\_\_\_\_ daughter threw her arms around him to comfort him, and she, too, turned to gold. "The golden touch is no blessing," Midas cried.

**SubQuestion No : 22**

**Q.22** Select the most appropriate option to fill in blank number 2.

- Ans  1. next felt  
 2. touched  
 3. kept  
 4. left

Question ID : 264330153526

Option 1 ID : 264330601614

Option 2 ID : 264330601612

Option 3 ID : 264330601611

Option 4 ID : 264330601613

Status : Answered

Chosen Option : 2

**Comprehension:**

In the following passage, some words have been deleted. Read the passage carefully and select the most appropriate option to fill in each blank.

Once there was a king named Midas who was granted a (1)\_\_\_\_\_ by Dionysus, the god of wine. For his wish, Midas asked that whatever he (2)\_\_\_\_\_ would turn to gold. Despite Dionysus' efforts to prevent it, Midas pleaded that this was a fantastic wish, and so, it was bestowed. Excited about his newly-earned (3)\_\_\_\_\_, Midas started touching all kinds of things, turning each item into pure gold. But soon, Midas became (4)\_\_\_\_\_. As he picked up a piece of food, he found he couldn't eat it. It had turned to gold in his hand. Hungry, Midas groaned, "I'll starve! Perhaps this was not such an excellent wish after all!" Seeing his dismay, Midas' (5)\_\_\_\_\_ daughter threw her arms around him to comfort him, and she, too, turned to gold. "The golden touch is no blessing," Midas cried.

**SubQuestion No : 23**

**Q.23** Select the most appropriate option to fill in blank number 3.

Ans  1. legacies

2. powers

3. awards

4. visuals

Question ID : 264330153527

Option 1 ID : 264330601618

Option 2 ID : 264330601615

Option 3 ID : 264330601617

Option 4 ID : 264330601616

Status : Answered

Chosen Option : 2

**Comprehension:**

In the following passage, some words have been deleted. Read the passage carefully and select the most appropriate option to fill in each blank.

Once there was a king named Midas who was granted a (1)\_\_\_\_\_ by Dionysus, the god of wine. For his wish, Midas asked that whatever he (2)\_\_\_\_\_ would turn to gold. Despite Dionysus' efforts to prevent it, Midas pleaded that this was a fantastic wish, and so, it was bestowed. Excited about his newly-earned (3)\_\_\_\_\_, Midas started touching all kinds of things, turning each item into pure gold. But soon, Midas became (4)\_\_\_\_\_. As he picked up a piece of food, he found he couldn't eat it. It had turned to gold in his hand. Hungry, Midas groaned, "I'll starve! Perhaps this was not such an excellent wish after all!" Seeing his dismay, Midas' (5)\_\_\_\_\_ daughter threw her arms around him to comfort him, and she, too, turned to gold. "The golden touch is no blessing," Midas cried.

**SubQuestion No : 24**

**Q.24** Select the most appropriate option to fill in blank number 4.

Ans  1. mad

2. hungry

3. tired

4. angry

Question ID : 264330153528

Option 1 ID : 264330601620

Option 2 ID : 264330601622

Option 3 ID : 264330601621

Option 4 ID : 264330601619

Status : Answered

Chosen Option : 3

**Comprehension:**

In the following passage, some words have been deleted. Read the passage carefully and select the most appropriate option to fill in each blank.

Once there was a king named Midas who was granted a (1)\_\_\_\_\_ by Dionysus, the god of wine. For his wish, Midas asked that whatever he (2)\_\_\_\_\_ would turn to gold. Despite Dionysus' efforts to prevent it, Midas pleaded that this was a fantastic wish, and so, it was bestowed. Excited about his newly-earned (3)\_\_\_\_\_, Midas started touching all kinds of things, turning each item into pure gold. But soon, Midas became (4)\_\_\_\_\_. As he picked up a piece of food, he found he couldn't eat it. It had turned to gold in his hand. Hungry, Midas groaned, "I'll starve! Perhaps this was not such an excellent wish after all!" Seeing his dismay, Midas' (5)\_\_\_\_\_ daughter threw her arms around him to comfort him, and she, too, turned to gold. "The golden touch is no blessing," Midas cried.

**SubQuestion No : 25**

**Q.25** Select the most appropriate option to fill in blank number 5.

Ans  1. estranged

2. guarded

3. beloved

4. hated

Question ID : 264330153529

Option 1 ID : 264330601624

Option 2 ID : 264330601626

Option 3 ID : 264330601623

Option 4 ID : 264330601625

Status : Answered

Chosen Option : 3