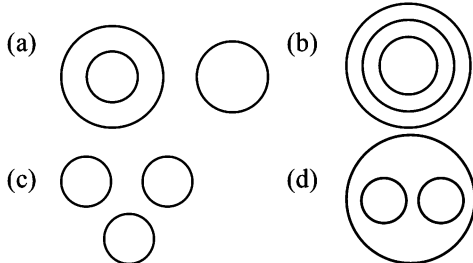


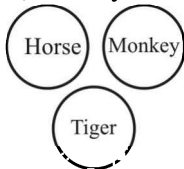
Venn Diagram

1. Choose the most suitable Venn diagram for the following words-
Horse, Monkey, Tiger



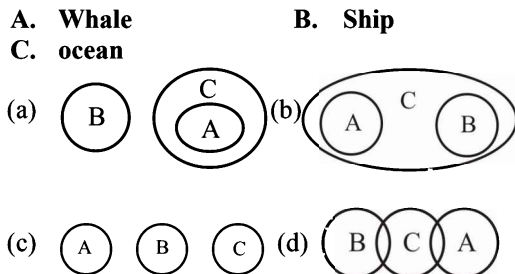
RRB Group-D – 17/09/2018 (Shift-I)

Ans : (c) Horse, Monkey and Tiger are different animal



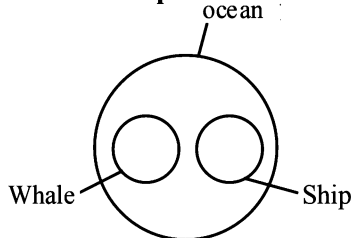
Hence option (c) is correct

2. Which of the following diagrams correctly represents the relationship between the given classes?
A. Whale B. Ship
C. ocean



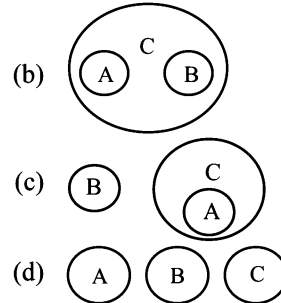
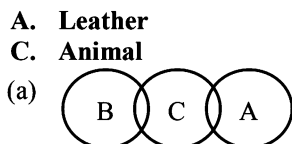
RRB Group-D – 17/09/2018 (Shift-I)

Ans : (b) Whale and ship both are live in ocean



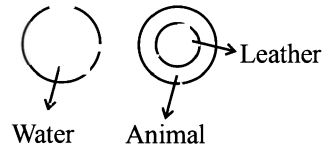
Hence option (b) is correct

3. Which of the following diagrams correctly represents the relationship between the given classes?
A. Leather B. Water
C. Animal

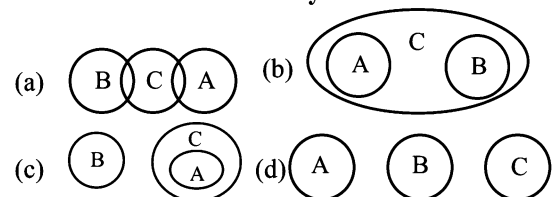


RRB Group-D – 20/09/2018 (Shift-II)

Ans : (c)

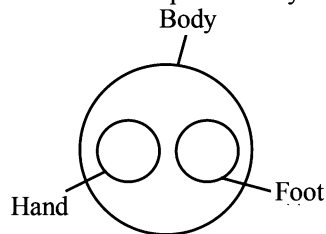


4. Which of the following diagrams correctly represents the relationship between the given classes?
A. Hand B. Foot C. Body



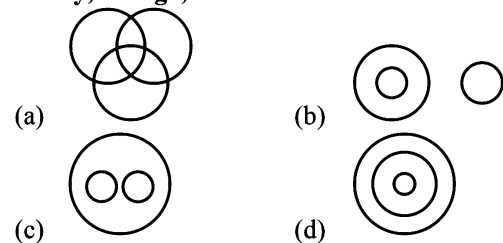
RRB Group-D – 20/09/2018 (Shift-III)

Ans : (b) Hand and foot are part of body



Hence option (b) is correct

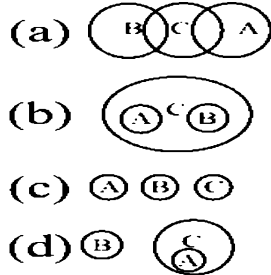
5. Choose the most suitable Venn diagram for the following words-
Chary, Mango, Fruit



RRB Group-D – 20/09/2018 (Shift-III)

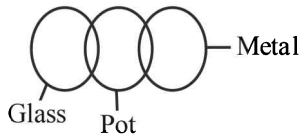
10. Which of the following diagrams correctly represents the relationship between the given classes?

A. Metal B. Glass
C. Pot



RRB Group-D – 28/09/2018 (Shift-II)

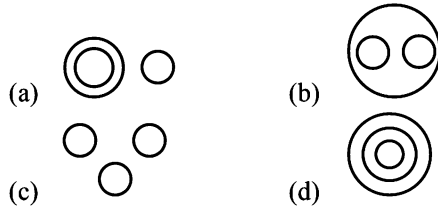
Ans. (a) Some pot is made by Glass and some made by metal



Hence option (a) is correct

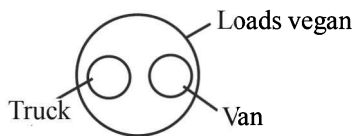
11. Which of the following diagrams correctly represents the relationship between the given classes?

Load Vegan, Truck, Van



RRB Group-D – 03/10/2018 (Shift-I)

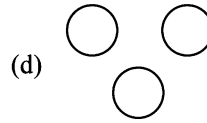
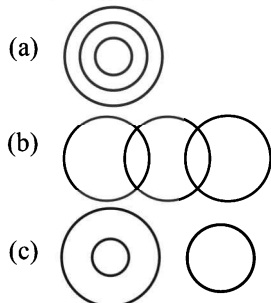
Ans : (b) Truck and Van both are goods carrier



Hence option (b) is correct

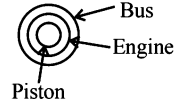
12. Which of the following diagrams correctly represents the relationship between the given classes?

Bus, Engine, Piston



RRB Group-D – 03/10/2018 (Shift-II)

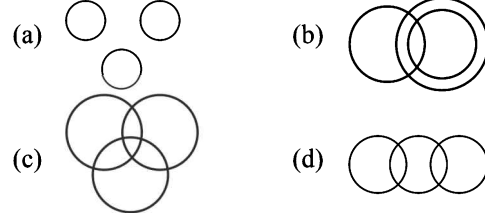
Ans : (a) In the given words the piston inside the engine and the engine remains inside the bus.



Hence option (a) is correct

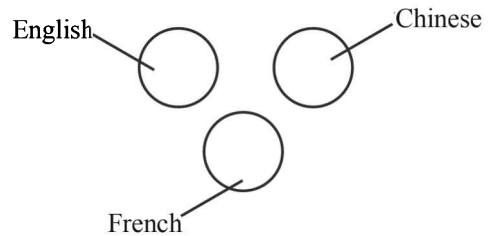
13. Which of the following diagrams correctly represents the relationship between the given words?

English, Chinese, French



RRB Group-D – 03/10/2018 (Shift-II)

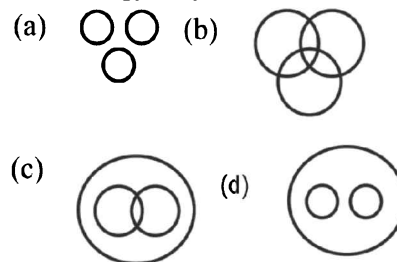
Ans : (a) All three words given are related to different languages.



Hence option (a) is correct

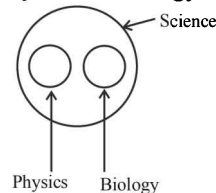
14. Which of the following diagrams correctly represents the relationship between the given classes?

Science, Biology, Physics



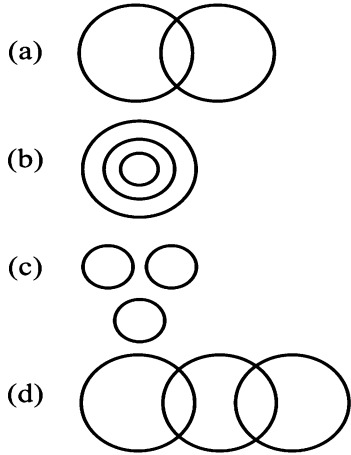
RRB Group-D – 03/10/2018 (Shift-III)

Ans : (d) Physic and biology are branches of science.



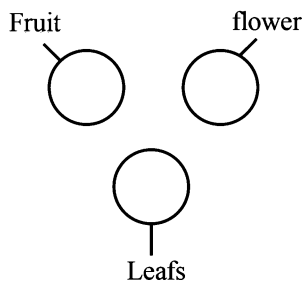
Hence option (d) is correct

15. Choose the most suitable Venn diagram for the following words?
Flower, Fruit, Leafs.



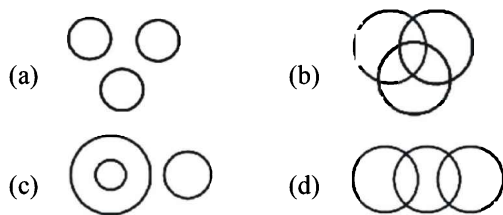
RRB Group-D – 08/10/2018 (Shift-II)

Ans : (c) There are no relation between fruit, flower and leafs.



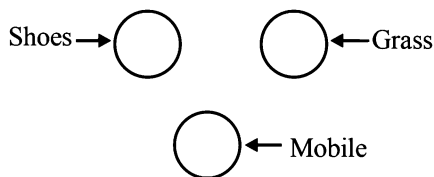
Hence option (c) is correct

16. Choose the most suitable Venn diagram for the following words?
Shoes, Grass, Mobile



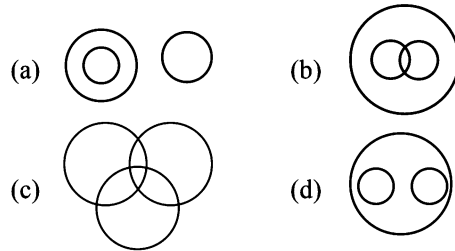
RRB Group-D – 11/10/2018 (Shift-II)

Ans : (a) There are no relation shoes, Grass and Mobile.



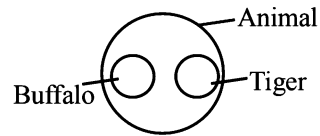
Hence option (a) is correct

17. Choose the best suitable Venn diagram for the following words:
"Tiger, Buffalo, Animals"



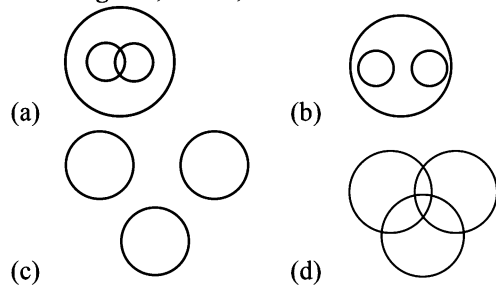
RRB Group-D – 12/10/2018 (Shift-III)

Ans : (d) Buffalo and tiger both are animal.



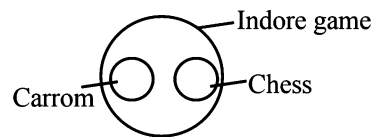
Hence option (d) is correct

18. Choose the most suitable Venn diagram for the following words?
Indoor game, Chess, Carrom



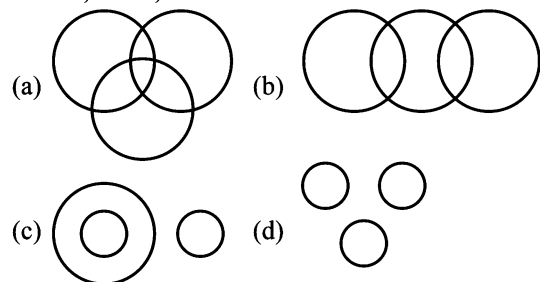
RRB Group-D – 12/10/2018 (Shift-III)

Ans : (b) Carrom and Chess both are Indore game.



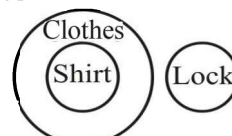
Hence option (b) is correct

19. Choose the most suitable Venn diagram for the following words?
Cloths, Shirt, Lock



RRB Group-D – 16/10/2018 (Shift-I)

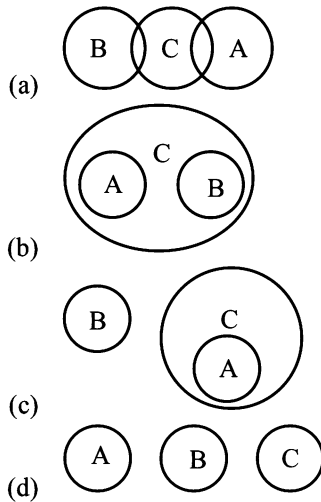
Ans. (c) Shirts is a type of clothes and lock if different.



Hence option (c) is correct

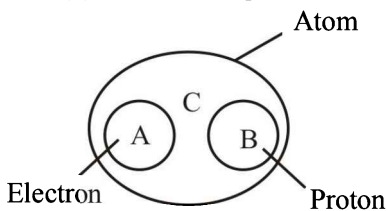
20. Which of the following diagrams correctly represents the relationship between the given classes?

- A. Electron B. Proton
C. Atom



RRB Group-D – 16/10/2018 (Shift-III)

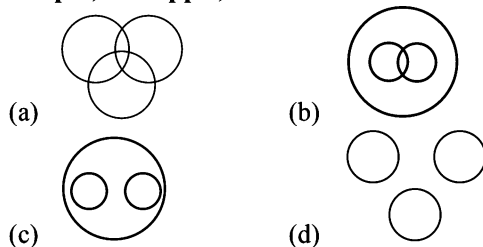
Ans : (b) Electron and proton both are part of atom.



Hence option (b) is correct

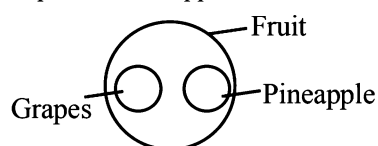
21. Choose the most suitable Venn diagram for the following words?

- Grapes, Pineapple, Fruit



RRB Group-D – 16/10/2018 (Shift-III)

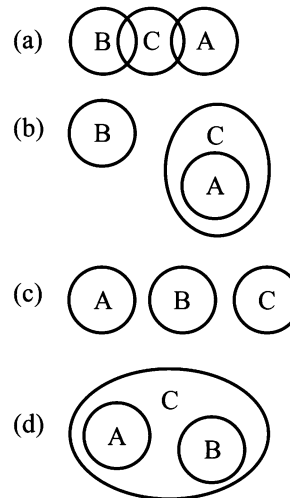
Ans : (c) Grapes and Pineapple are Fruits.



Hence option (c) is correct

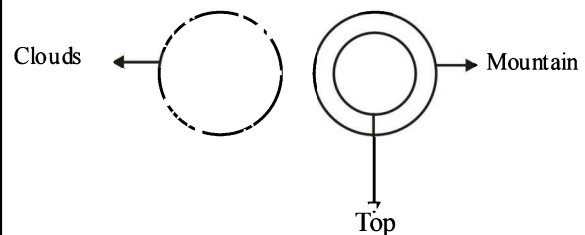
22. Which of the following diagrams correctly represents the relationship between the given classes?

- A) Top
B) Clouds
C) Mountain



RRB Group-D – 17/09/2018 (Shift-II)

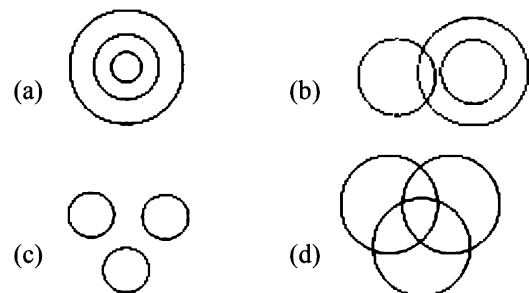
Ans : (b)



Hence option (b) is correct

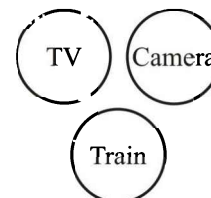
23. Choose the most suitable Venn diagram for the following words?

- TV, Camera, Train



RRB Group-D – 17/09/2018 (Shift-III)

Ans. (c) TV, Camera and Train are different from each other.



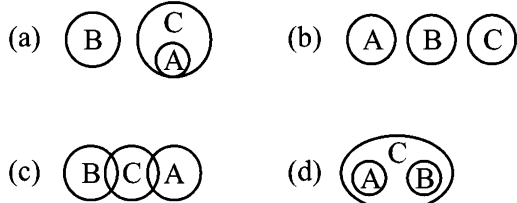
Hence option (c) is correct

24. Which of the following diagrams correctly represents the relationship between the given classes?

- A. Button
B. Pen
C. Shirt

37. Which of the following diagrams correctly represents the relationship between the given classes-

A. Bell B. Water C. Brass



RRB Group-D – 27/09/2018 (Shift-I)

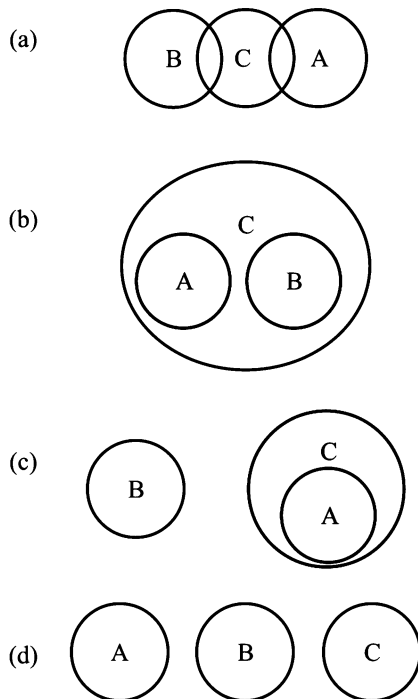
Ans. (a) Brass is used for making bell but water is different.



Hence option (a) is correct

38. Which of the following diagrams correctly represents the relationship between the given classes-

A) Coat B) Clock
C) Letter



RRB Group-D – 27/09/2018 (Shift-III)

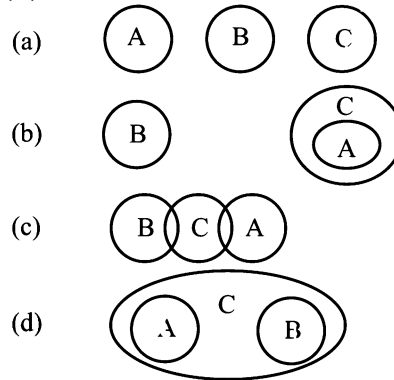
Ans : (d) Coat clock and letter are different from each other



Hence option (d) is correct

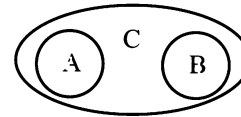
39. Which of the following diagrams correctly represents the relationship between the given classes-

(A) Spades (B) Betel
(C) Pack of cards



RRB Group-D – 28/09/2018 (Shift-I)

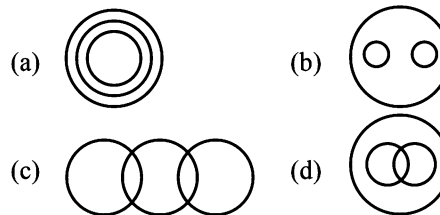
Ans : (d) spades and betel both are friend if in pack of cards.



Hence option (d) is correct

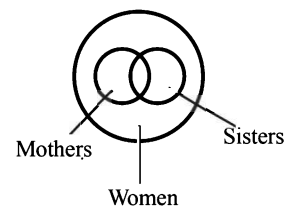
40. Choose the most suitable Venn diagram for the following words-

Women, Mothers, Sisters



RRB Group-D – 04/10/2018 (Shift-II)

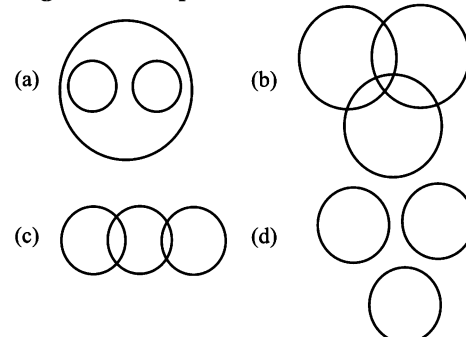
Ans : (d)



Hence option (d) is correct

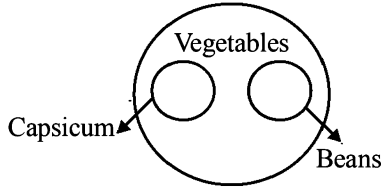
41. Choose the most suitable Venn diagram for the following words-

Vegetables, Capsicum, Beans



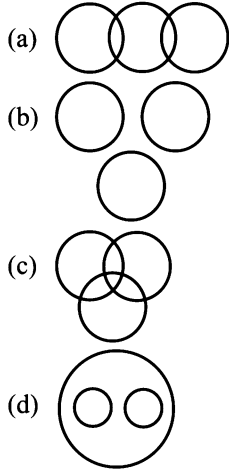
RRB Group-D – 05/10/2018 (Shift-I)

Ans. (a) Capsicum, and Beans both are vegetables.



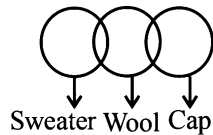
Hence option (a) is correct

42. Choose the most suitable Venn diagram for the following words- Wool, Sweater, Cap



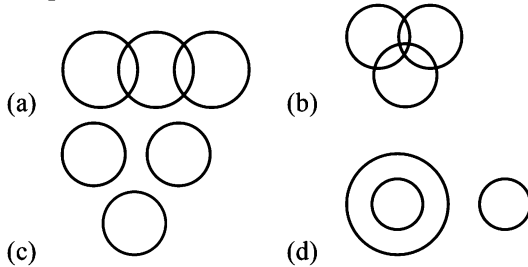
RRB Group-D – 09/10/2018 (Shift-I)

Ans. (a) some cap and sweater is made by wool.



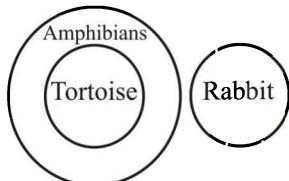
Hence option (a) is correct

43. Choose the most suitable Venn diagram for the following words- Amphibians, Tortoise, Rabbit



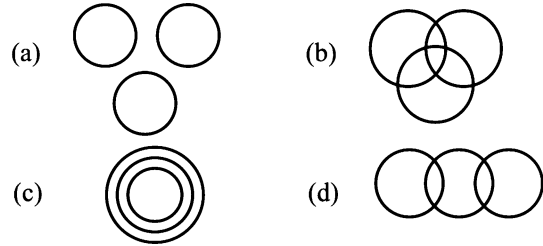
RRB Group-D – 10/10/2018 (Shift-I)

Ans : (d) Tortoise is amphibians while Rabbit is mammals.



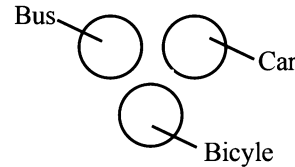
Hence option (d) is correct

44. Choose the most suitable Venn diagram for the following words- Bus, Car, Bicycle



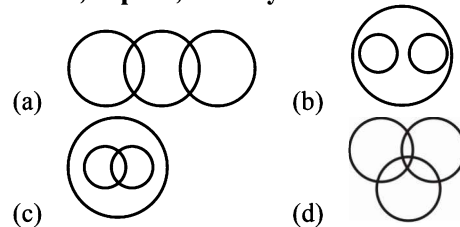
RRB Group-D – 10/10/2018 (Shift-III)

Ans : (a) Bus, Car and Bicycle are different from each other.




Hence option (a) is correct

45. Choose the most suitable Venn diagram for the following words- Earth, Jupiter, Solar system



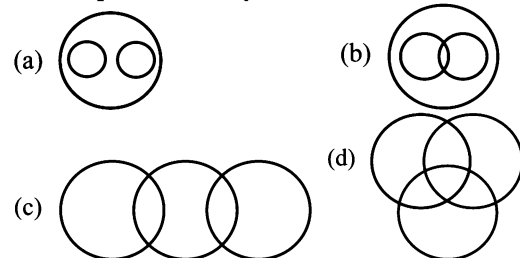
RRB Group-D – 10/10/2018 (Shift-III)

Ans : (b) Earth and Jupiter both are part of Solar system.



Hence option (b) is correct

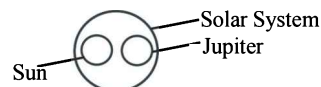
46. Choose the most suitable Venn diagram for the following words- Sun, Jupiter, Solar system



RRB Group-D – 05/11/2018 (Shift-I)

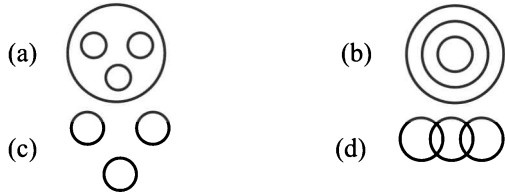
RRB Group-D – 09/10/2018 (Shift-II)

Ans. (a) Sun and Jupiter both are part of Solar system.



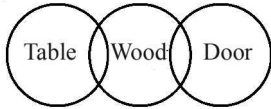
Hence option (a) is correct

47. Choose the most suitable Venn diagram for the following words-
Wood, Table, Door



RRB Group-D – 11/10/2018 (Shift-III)

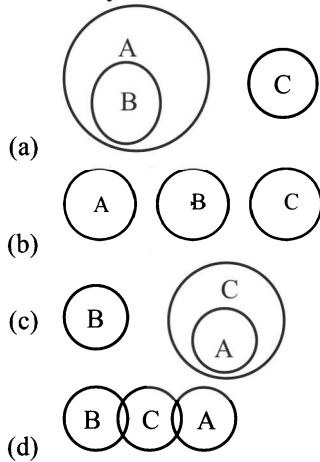
Ans : (d) Some table and door are made by wood.



Hence option (d) is correct

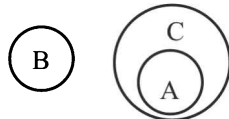
48. Which of the following diagrams correctly represents the relationship between the given classes?

- A. Blood
- B. Wheat
- C. Body



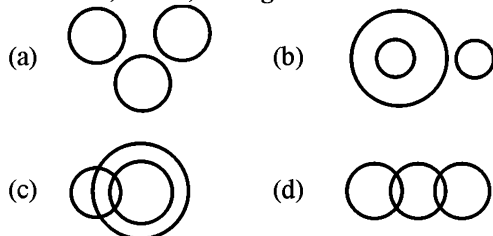
RRB Group-D – 16/10/2018 (Shift-II)

Ans : (c) Blood is found in body while wheat is a type of crop.



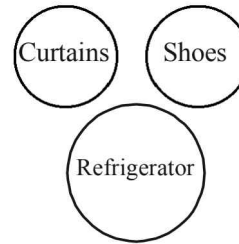
Hence option (c) is correct

49. Choose the most suitable Venn diagram for the following words-
Curtains, Shoes, Refrigerator



RRB Group-D – 22/10/2018 (Shift-I)

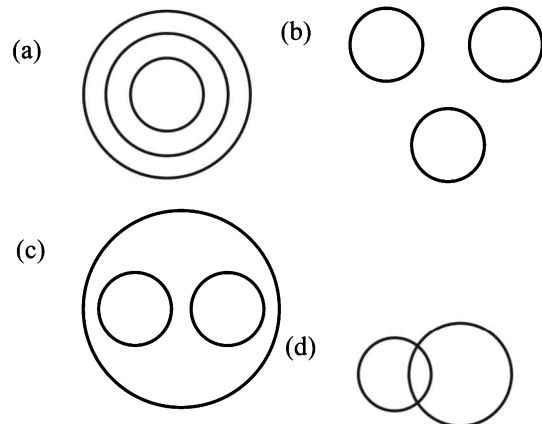
Ans : (a) Curtains Shoes and Refrigerator are different from each other.



Hence option (a) is correct

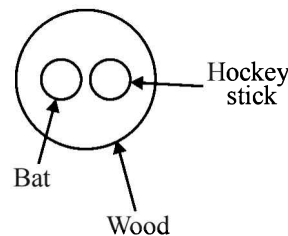
50. Choose the most suitable Venn diagram for the following words-

Bat, Hockey stick, Wood



RRB Group-D – 22/10/2018 (Shift-II)

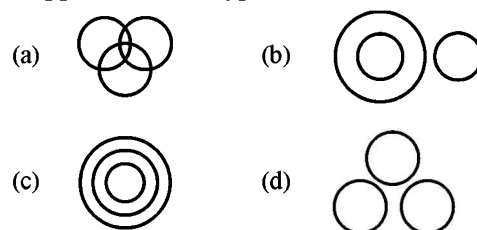
Ans : (c) Bat and Hockey stick, both are made by Wood.



Hence option (c) is correct

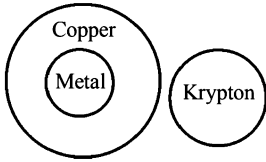
51. Choose the most suitable Venn diagram for the following words-

Copper, Metal, Krypton



RRB Group-D – 22/10/2018 (Shift-III)

Ans : (b) Copper is a type of Metal while Krypton is a gas.



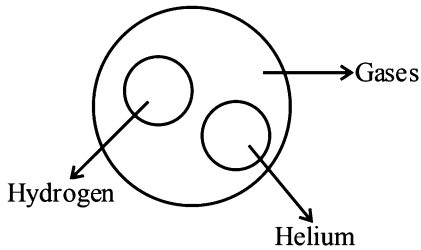
Hence option (b) is correct

52. Choose the most suitable Venn diagram for the following words-
Hydrogen, Gases, Helium

- (a)
- (b)
- (c)
- (d)

RRB Group-D – 24/10/2018 (Shift-II)

Ans. (d) Helium and Hydrogen both are Gas.



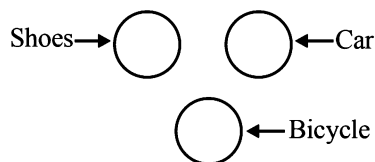
Hence option (d) is correct

53. Choose the most suitable Venn diagram for the following words-
Shoes, Car, Bicycle

- (a)
- (b)
- (c)
- (d)

RRB Group-D – 31/10/2018 (Shift-I)

Ans : (b) Shoes, car and bicycle are different from each other.



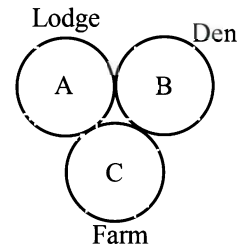
Hence option (b) is correct

54. Choose the most suitable Venn diagram for the following words-
Lodge, Den, Farm

- (i)
 - (ii)
 - (iii)
 - (iv)
 - (v)
 - (vi)
 - (vii)
 - (viii)
- (a) viii (b) vi
(c) i (d) ii

RRB Group-D – 05/12/2018 (Shift-I)

Ans : (a) Lodge, Den and Farm are different from each other.



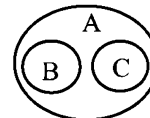
Hence option (a) is correct

55. Choose the most suitable Venn diagram for the following words-
A. Dresses, B. Formal, C. Casual

- (i)
 - (ii)
 - (iii)
 - (iv)
 - (v)
 - (vi)
 - (vii)
 - (viii)
- (a) i (b) viii
(c) iii (d) iv

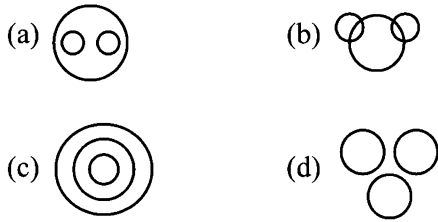
RRB Group-D – 05/12/2018 (Shift-II)

Ans. (a) Formal and Casual both are type of Dresses,



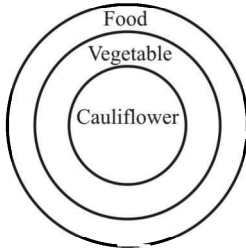
Hence option (a) is correct

56. Which of the following diagrams correctly represents the relationship between the given classes-
Vegetables, Food, Cauliflower



RRB Group-D – 05/12/2018 (Shift-II)

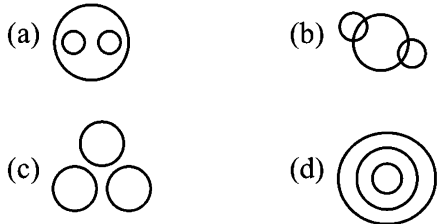
Ans. (c)



Hence option (c) is correct

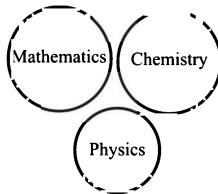
57. Choose the most suitable Venn diagram for the following words-

Mathematics, Physics, Chemistry



RRB Group-D – 04/12/2018 (Shift-III)

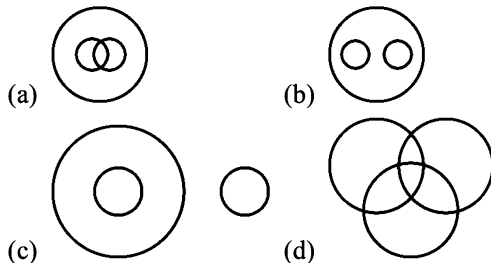
Ans. (c) Mathematics, Physics and chemistry are different from each other.



Hence option (c) is correct

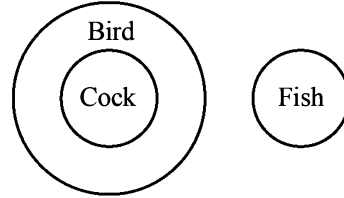
58. Which of the following diagrams correctly represents the relationship between the given classes-

Bird, Fish, Cock



RRB Group-D – 03/12/2018 (Shift-III)

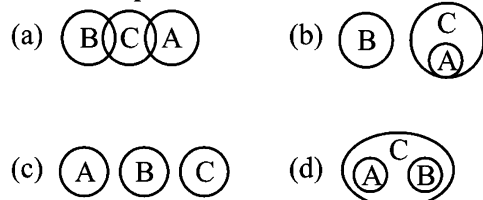
Ans. (c)



Hence option (c) is correct

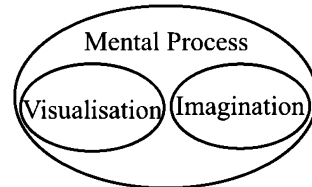
59. Which of the following diagrams correctly represents the relationship between the given classes?

A. Visualisation
B. Imagination
C. Mental process



RRB Group-D – 16/11/2018 (Shift-I)

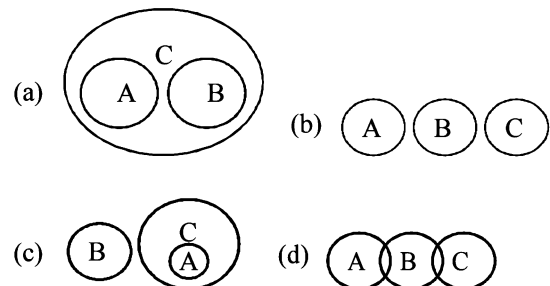
Ans : (d) Visualisation and Imagination both are Mental process.



Hence option (d) is correct

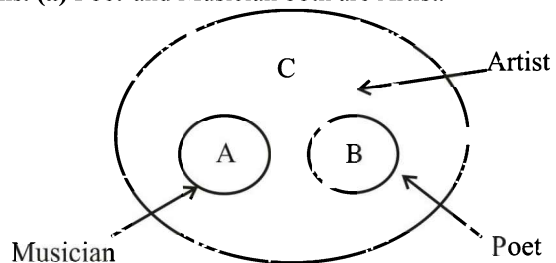
60. Which of the following diagrams correctly represents the relationship between the given classes-

(A) Musician (B) Poet (C) Artist



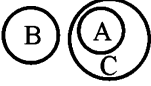



RRB Group-D – 16/11/2018 (Shift-II)

Ans. (a) Poet and Musician both are Artist.



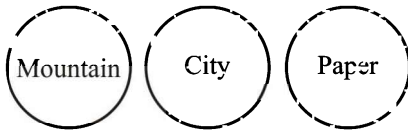
Hence option (a) is correct

61. Which of the following diagrams correctly represents the relationship between the given classes-

- A) Mountain B) City C) Paper
- (a)  (b) 
- (c)  (d) 

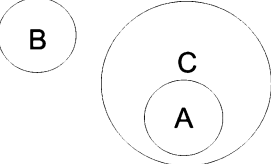
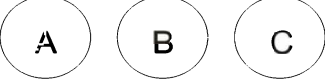
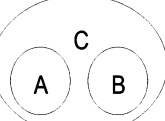

RRB Group-D - 15/11/2018 (Shift-I)

Ans : (c) Mountain, City and Paper are different from each other.



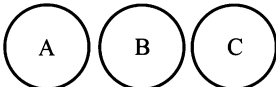
Hence option (c) is correct

62. Which of the following diagrams correctly represents the relationship between the given classes?

- A) Floors B) Plastic C) Lock
- (A)  (b) 
- (C)  (d) 


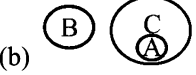
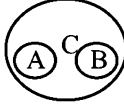
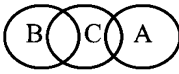
RRB Group-D - 15/11/2018 (Shift-III)

Ans : (b) Floors, Plastic and lock are different from each other.



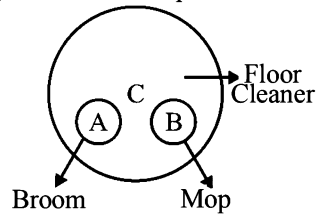
Hence option (b) is correct

63. Which of the following diagrams correctly represents the relationship between the given classes?

- A) Broom B) Mop C) Floor cleaner
- (a)  (b) 
- (c)  (d) 

RRB Group-D - 12/11/2018 (Shift-I)


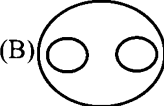


Ans. (c) Broom and Mop both of floor cleaner.



Hence option (c) is correct

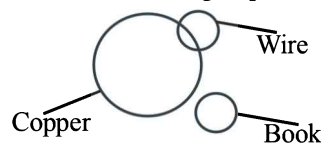
64. Which of the following diagrams correctly represents the relationship between the given classes-

Copper, Book, Wire

- (A)  (B) 
- (C)  (D) 
- (a) A (b) B
(c) C (d) D

RRB Group-D - 05/11/2018 (Shift-I)

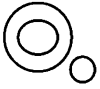

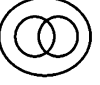

Ans. (c) Some copper is used for making wire, but book is different from this group.



Hence option (c) is correct

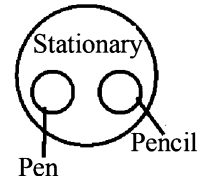
65. Which of the following diagrams correctly represents the relationship between the given classes-

Pen, Stationary, Pencil

- (a)  (b) 
- (c)  (d) 

RRB Group-D - 02/11/2018 (Shift-I)

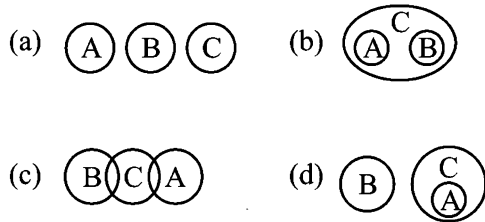
Ans. (b) Pen and Pencil both are stationary.



Hence option (b) is correct

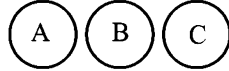
66. Which of the following diagrams correctly represents the relationship between the given classes-

A. Water B. Mountain
C. Dam



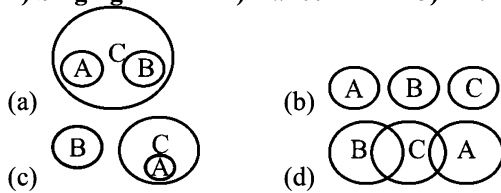
RRB Group-D – 02/11/2018 (Shift-I)

Ans. (a) Water, Mountain and Dam are different from each other.



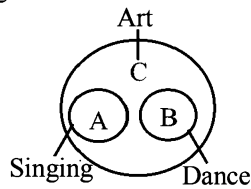
Hence option (a) is correct

67. Which of the following correctly represents the relationship between-
A) Singing B) Dance C) Art



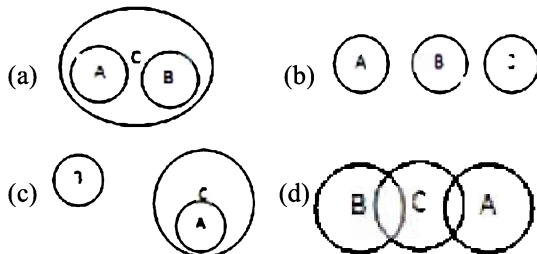
RRB Group-D – 02/11/2018 (Shift-II)

Ans. (a) Singing and Dance both are Art.



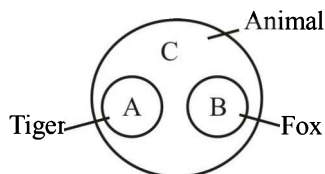
Hence option (a) is correct

68. Which of the following correctly represents the relationship between-
A. Tiger B. Fox C. Animal



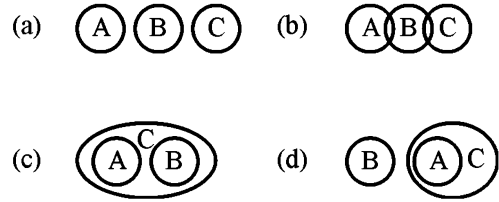
RRB Group-D – 02/11/2018 (Shift-III)

Ans. (a) Tiger and Fox both are Animal.



Hence option (a) is correct

69. Which of the following diagrams correctly represents the relationship between the given classes?
(A) Metal (B) Sand (C) Water



RRB Group-D – 01/11/2018 (Shift-II)

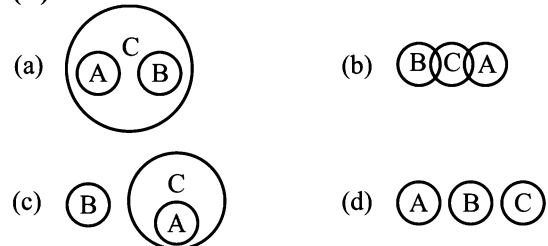
Ans : (a) Metal, Sand and Water are different from each other



Hence option (a) is correct

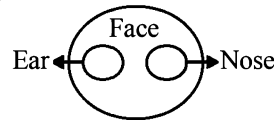
70. Which of the following correctly represents the relationship between-

(A) Ear
(B) Nose
(C) Face



RRB Group-D – 05/11/2018 (Shift-III)

Ans. (a)

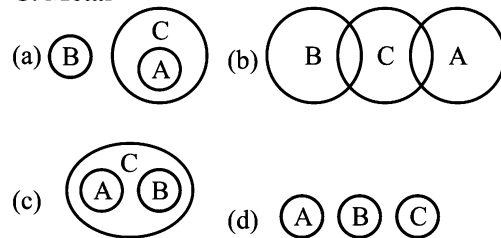


Hence option (a) is correct

71. Which of the following diagrams correctly represents the relationship between the given classes-

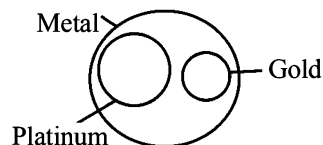
A. Gold
C. Metal

B. Platinum



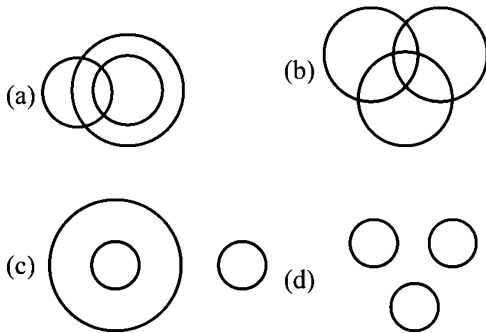
RRB Group-D – 31/10/2018 (Shift-III)

Ans : (c) Platinum and Gold both are Metal.



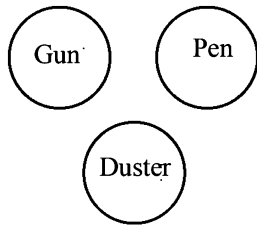
Hence option (c) is correct

72. Choose the most suitable Venn diagram for the following words-
Pen, Gun, Duster



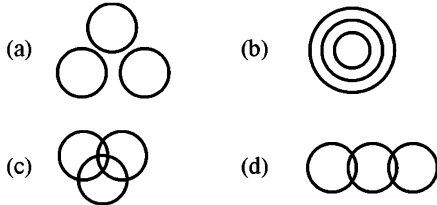
RRB Group-D – 15/10/2018 (Shift-III)

Ans. (d) Gum, Pen and Duster are different from each other.



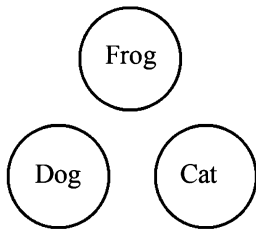
Hence option (d) is correct

73. Choose the most suitable Venn diagram for the following words- Frog, Cat, Dog



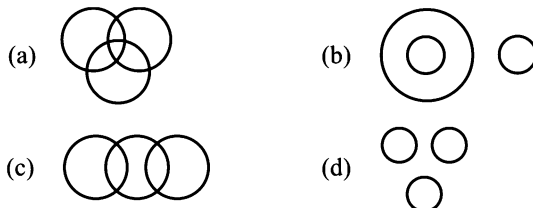
RRB Group-D – 12/10/2018 (Shift-II)

Ans : (a) Frog, Cat, and Dog are different organisms.



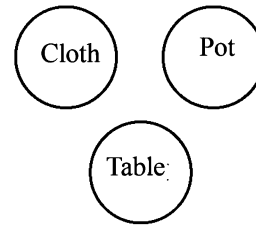
Hence option (a) is correct

74. Which of the following correctly represents the relationship between- Cloth, Pot, Table



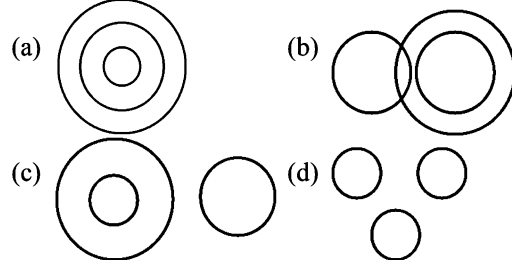
RRB Group-D – 09/10/2018 (Shift-II)

Ans. (d) Cloth, Pot and Table are different from each other.



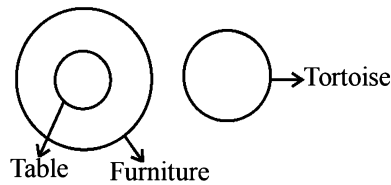
Hence option (d) is correct

75. Choose the most suitable Venn diagram for the following words- Table, Tortoise, Furniture



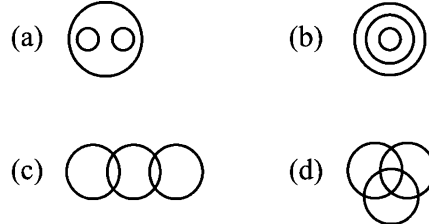
RRB Group-D – 08/10/2018 (Shift-I)

Ans. (c)



Hence option (c) is correct

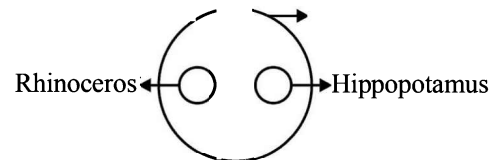
76. Choose the most suitable Venn diagram for the following words- Animals, Hippopotamus, Rhinoceros



RRB Group-D – 05/10/2018 (Shift-III)

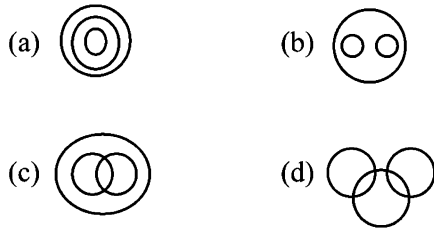
Ans. (a)

Rhinoceros and Hippopotamus both are Animals



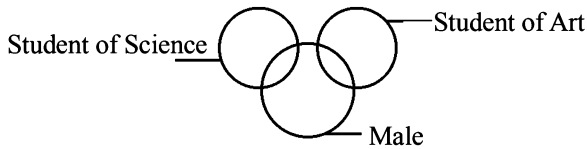
Hence option (a) is correct

77. Which of the following diagrams correctly represents the relationship between the given classes- Students of science, Students of Art, Male



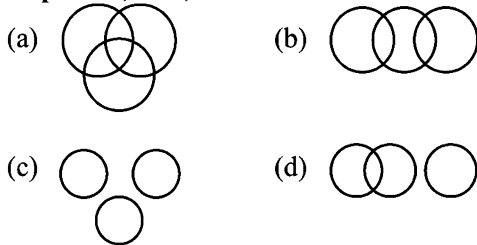
RRB Group-D – 05/10/2018 (Shift-III)

Ans. (d) Some Student of Art and, Student of Science is male.



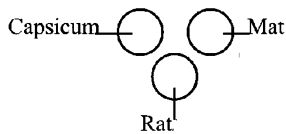
Hence option (d) is correct

78. Choose the most suitable Venn diagram for the following words- Capsicum, Mat, Rat.



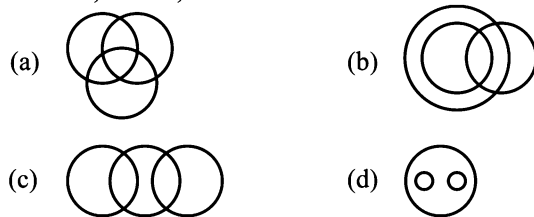
RRB Group-D – 04/10/2018 (Shift-I)

Ans. (c) Capsicum, Mat and Rat are different from each others.




Hence option (c) is correct

79. Choose the most suitable Venn diagram for the following words- Animal, Zebra, Rhinoceros-




RRB Group-D – 01/10/2018 (Shift-I)

Ans. (d) Zebra and Rhinoceros- both are animal.



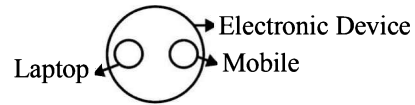
Hence option (d) is correct

80. Choose the most suitable Venn diagram for the following words- Mobile, Laptop, Electronic device



RRB Group-D – 01/10/2018 (Shift-I)


Ans. (a) Laptop and Mobile both are electronic device



Hence option (a) is correct

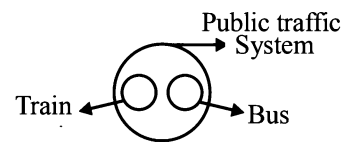
81. Choose the most suitable Venn diagram for the following words-

Train, Bus, Public traffic System



RRB Group-D – 01/10/2018 (Shift-I)

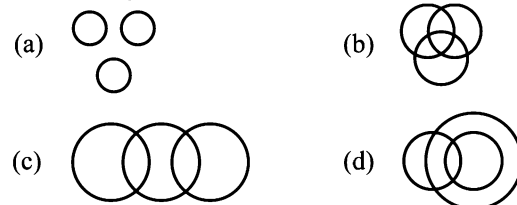
Ans. (a) Train and Bus, both are a part of public traffic system.



Hence option (a) is correct

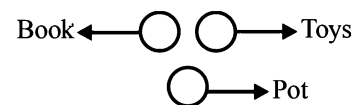
82. Choose the most suitable Venn diagram for the following words-

Books, Toys, Pot



RRB Group-D – 01/10/2018 (Shift-II)

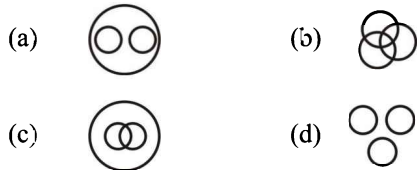
Ans. (a) Books, Toys and Pot are different from each other.



Hence option (a) is correct

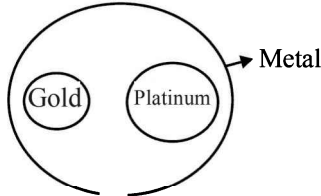
83. Choose the most suitable Venn diagram for the following words-

Metal, Gold, Platinum



RRB Group-D – 01/10/2018 (Shift-III)

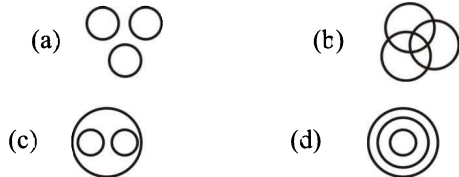
Ans : (a) Gold and Platinum both are Metal.



Hence option (a) is correct


84. Choose the most suitable Venn diagram for the following words-

Amphibians, Tortoise, Crocodile



RRB Group-D – 01/10/2018 (Shift-III)

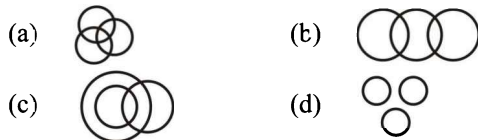
Ans : (c) Tortoise and Crocodile both are Amphibians,



Hence option (c) is correct

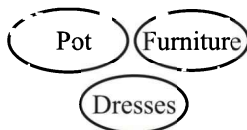
85. Choose the most suitable Venn diagram for the following words-

Pot, Furniture, dresses



RRB Group-D – 01/10/2018 (Shift-III)

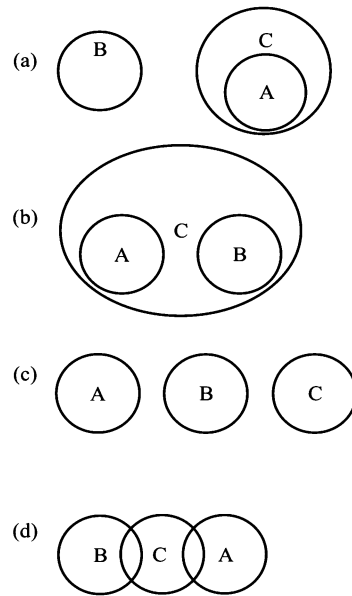
Ans : (d) Pot, Furniture and Dress are different from each other.



Hence option (d) is correct

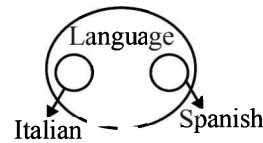
86. Which of the following diagrams correctly represents the relationship between the given classes-

- A) Italian
- B) Spanish
- C) Language



RRB Group-D – 28/09/2018 (Shift-III)

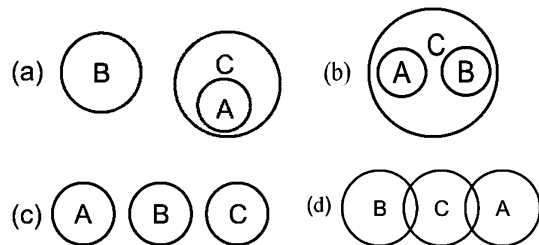
Ans : (b) Italian and Spanish both are Language.



Hence option (b) is correct

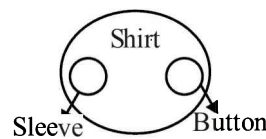
87. Which of the following diagrams correctly represents the relationship between the given classes-

- (A) Button
- (B) Sleeve
- (C) Shirt



RRB Group-D – 23/09/2018 (Shift-II)

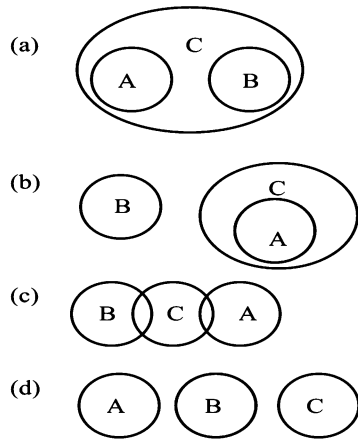
Ans : (b) Button and Sleeve both are related to shirt.



Hence option (b) is correct

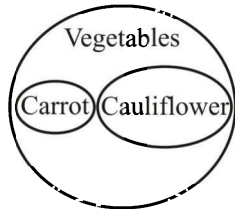
88. Choose the most suitable Venn diagram for the following words-

- A. Carrot
- B. Cauliflower
- C. Vegetables



RRB Group-D – 19/09/2018 (Shift-I)

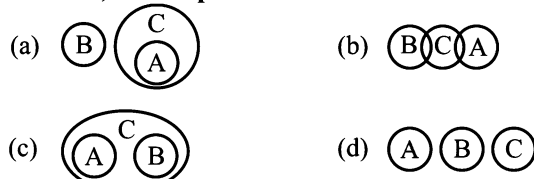
Ans : (a) Carrot and Cauliflower both are Vegetables.



Hence option (a) is correct

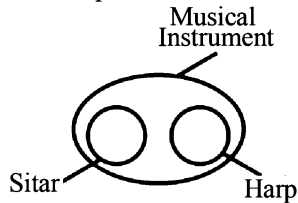
89. Which of the following diagrams correctly represents the relationship between the given classes-

A. Sitar, B. Harp C. Musical Instrument



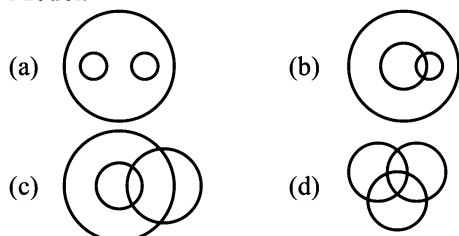
RRB Group-D – 18/09/2018 (Shift-III)

Ans. (c) Sitar and Harp both are Musical Instrument.



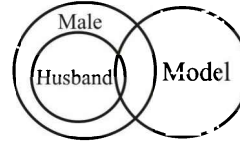
Hence option (c) is correct

90. Which of the following diagrams represent the relationship between Male, Husband and Model.



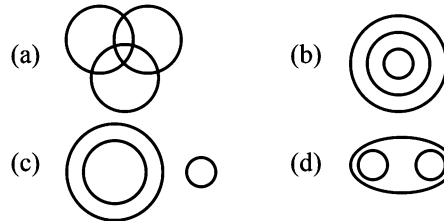
RRB ALP & Tec. (31-08-18 Shift-I)

Ans : (c)



Hence option (c) is correct

91. Which of the following Venn diagrams correctly represents the following classes: Karnataka, India, Asia



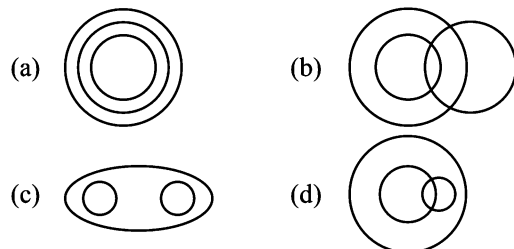
RRB ALP & Tec. (30-08-18 Shift-I)

Ans : (b)



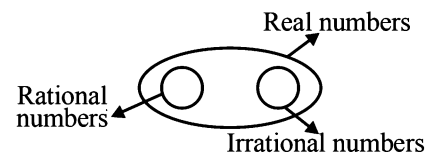
Hence option (b) is correct

92. The diagram that represent rational numbers, irrational number and real number is:



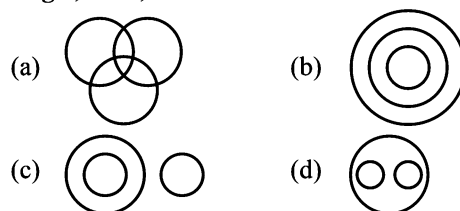
RRB ALP & Tec. (30-08-18 Shift-III)

Ans : (c)



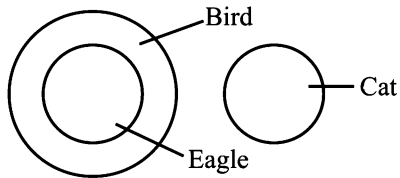
Hence option (c) is correct

93. Which of the following Venn diagrams correctly represents the following classes: Eagle, Bird, Cat



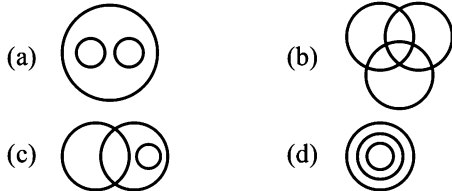
RRB ALP & Tec. (14-08-18 Shift-III)

Ans : (c)



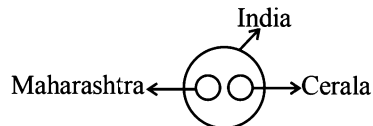
Hence option (c) is correct

94. Select the most suitable Venn diagram to represent the following relationship.
India, Maharashtra and Kerala



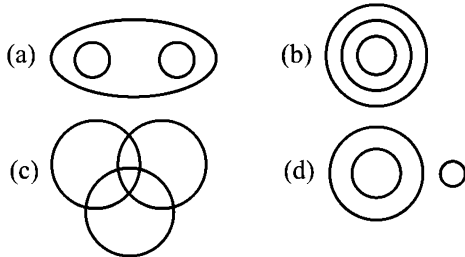
RRB ALP & Tec. (10-08-18 Shift-II)

Ans : (a) Maharashtra and Kerala are state India.



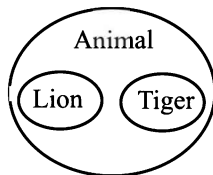
Hence option (a) is correct

95. Which of the following Venn diagrams correctly represents the following classes :
Lion, Tiger, Animals



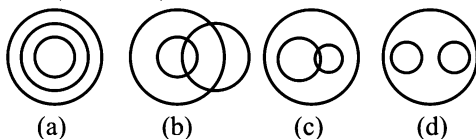
RRB ALP & Tec. (17-08-18 Shift-II)

Ans : (a) Lion and Tiger both are Animal



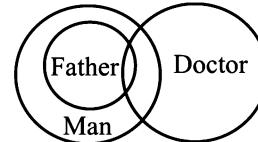
Hence option (a) is correct

96. Which of the following Venn diagrams correctly represents the following classes:
Men, Fathers, Doctors



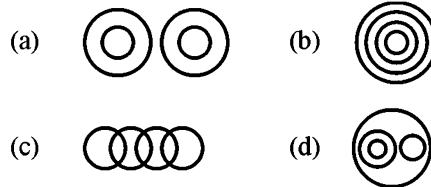
RRB ALP & Tec. (14-08-18 Shift-II)

Ans : (b)



Hence option (b) is correct

97. Which of the following diagrams correctly represents the relationship between the given classes-
Ring, Jewelry, Necklace, Ring of Diamonds




RRB JE - 31/05/2019 (Shift-III)

Ans. (d)



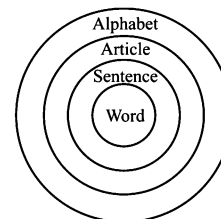
Hence option (d) is correct

98. Which of the following diagrams correctly represents the relationship among the given classes-
Word, Sentence, Alphabet, Article







RRB JE - 27/05/2019 (Shift-II)

Ans : (d)



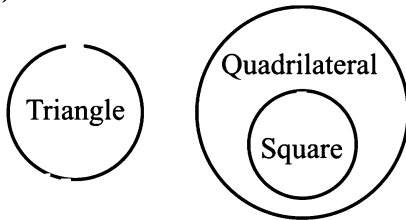
Hence option (d) is correct

99. Which of the following diagrams correctly represents the relationship between the given classes-
Triangle, Quadrilateral, Square

- (a)  (b) 
- (c)  (d) 





RRB JE - 26/06/2019 (Shift-III)

Ans : (b)



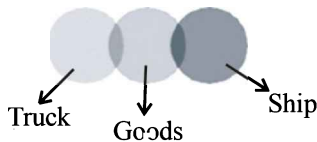
Hence option (b) is correct

100. Which of the following diagrams correctly represents the relationship between the given classes-
Truck, Ship, Goods

- (a)  (b) 
- (c)  (d) 





RRB JE - 01/06/2019 (Shift-I)

Ans : (b)



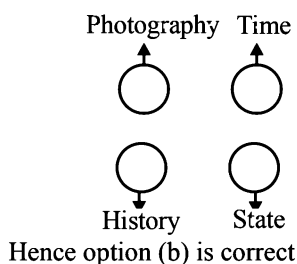
Hence option (b) is correct

101. Which of the following diagrams correctly represents the relationship between the given classes-
Photography, Time, History, Stage

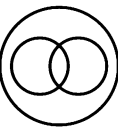

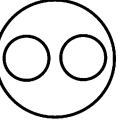
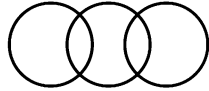
- (a)  (b) 
- (c)  (d) 

RRB JE - 30/05/2019 (Shift-II)

Ans : (b) Photograph, Time History and Stage are different from each others.

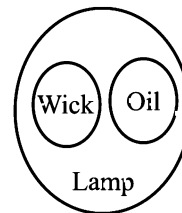


102. Which of the following diagrams correctly represents the relationship between the given classes-
Oil, Wick, Lamp

- (a)  (b) 
- (c)  (d) 





RRB JE - 29/05/2019 (Shift-I)

Ans : (c) Wick and oil are Part of Lamp.



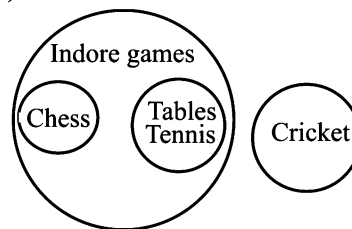
Hence option (c) is correct

103. Which of the following diagrams correctly represents the relationship between the given classes-
Indore Games, Chess, Table Tennis, Cricket

- (a)  (b) 
- (c)  (d) 






RRB JE - 31/05/2019 (Shift-I)

Ans : (d)



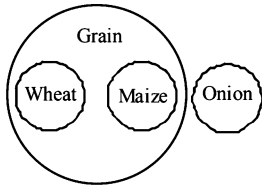
Hence option (d) is correct

104. Which of the following diagrams correctly represents the relationship between the given classes-
Wheat, Grain, Onion, Maize

- (a)   (b) 
- (c)  (d) 

RRB JE - 25/05/2019 (Shift-I)

Ans : (b)



Hence option (b) is correct

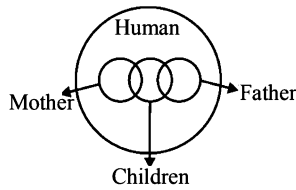
105. Which of the following diagrams correctly represents the relationship between the given classes-

Mother, Children, Human, Father

- (a)
- (b)
- (c)
- (d)

RRB JE - 23/05/2019 (Shift-II)

Ans : (b)



Hence option (b) is correct

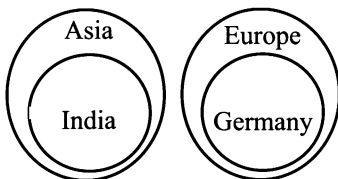
106. Which of the following diagrams correctly represents the relationship between the given classes-

India, Europe, Asia, Germany

- (a)
- (b)
- (c)
- (d)

RRB JE - 26/06/2019 (Shift-I)

Ans. (a)



Hence option (a) is correct


107. Which of the following diagrams correctly represents the relationship between the given classes-

Company, School, Culture, Health

- (a)
- (b)
- (c)
- (d)

RRB JE - 24/05/2019 (Shift-I)

Ans : (c)



Hence option (c) is correct

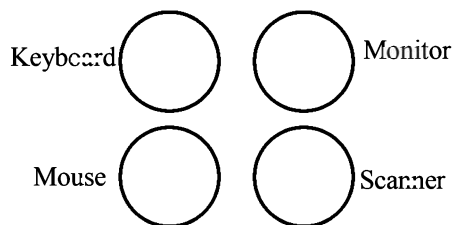
108. Which of the following diagrams correctly represents the relationship between the given classes-

Keyboard, Monitor, Mouse, Scanner

- (a)
- (b)
- (c)
- (d)

RRB JE - 02/06/2019 (Shift-II)

Ans. (b)



Hence option (b) is correct

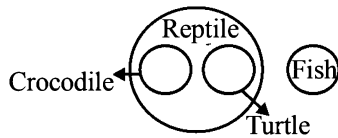
109. Which of the following diagrams correctly represents the relationship between the given classes-

Crocodile, Fish, Turtle, Reptile

- (a)
- (b)
- (c)
- (d)

RRB JE - 29/05/2019 (Shift-II)

Ans : (b)



Hence option (b) is correct

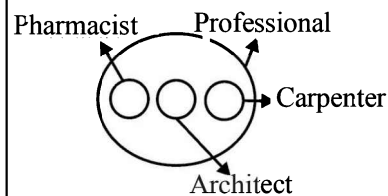
110. Which of the following diagrams correctly represents the relationship between the given classes-

Pharmacist, Professional, Architect, Carpenter

- (a)
- (b)
- (c)
- (d)

RRB JE - 22/05/2019 (Shift-III)

Ans : (a)



Hence option (a) is correct

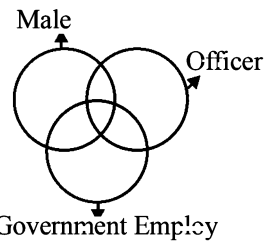
111. Which of the following diagrams correctly represents the relationship between the given classes-

Officer, Government Employ, Male

- (a)
- (b)
- (c)
- (d)

RRB JE - 26/05/2019 (Shift-II)

Ans : (c)



Hence option (c) is correct

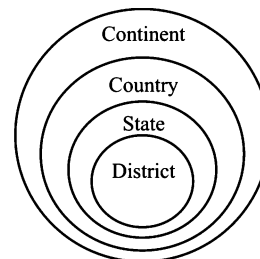
112. Which of the following diagrams correctly represents the relationship between the given classes-

State, Continent, District, Country

- (a)
- (b)
- (c)
- (d)

RRB JE - 01/06/2019 (Shift-III)

Ans. (a)



Hence option (a) is correct