

## Combined Graduate level Examination 2023 Tier I

Roll Number	
Candidate Name	
Venue Name	i-Tech Zone
Exam Date	18/07/2023
Exam Time	9:00 AM - 10:00 AM
Subject	Combined Graduate Level Examination Tier I 2023

Section : General Intelligence and Reasoning

**Q.1** Which two signs should be interchanged to make the given equation correct?

$$10 - 4 + 13 \div 15 \times 3 = 71$$

Ans ☒ 1. + and ×

☒ 2. - and ÷

☒ 3. ÷ and ×

☒ 4. - and ×

Question ID : 264330120856

Status : Answered

Chosen Option : 3

**Q.2** Select the option that represents the letters that, when sequentially placed from left to right in the blanks below, will complete the letter series.

BRU\_TLP\_RUI\_LPBR\_ITLPB\_UIT\_\_

Ans ☒ 1. IBTRUPL

☒ 2. IBTUPLR

☒ 3. IBRUTLP

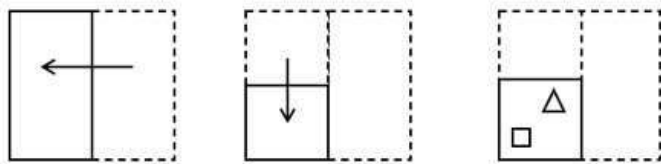
☒ 4. IBTURLP

Question ID : 264330131038

Status : Answered

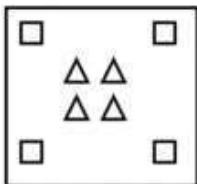
Chosen Option : 4

Q.3 A paper is folded and cut as shown below. How will it appear when unfolded?

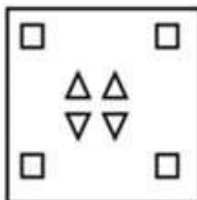


Ans

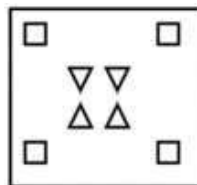
✗ 1.



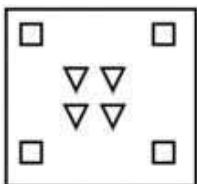
✗ 2.



✓ 3.



✗ 4.

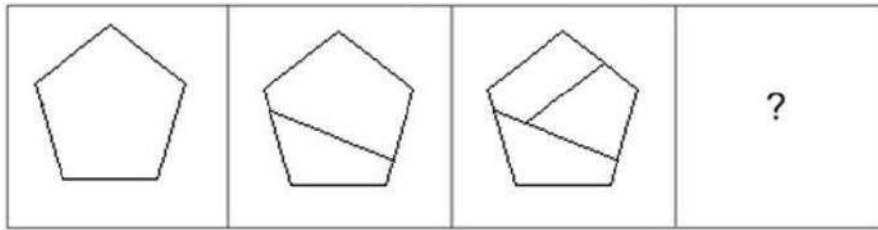


Question ID : 264330101179

Status : Answered

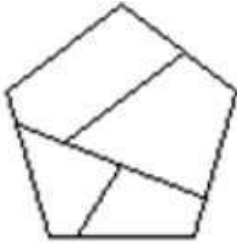
Chosen Option : 3

**Q.4** Select the figure that will come next in the following figure series.

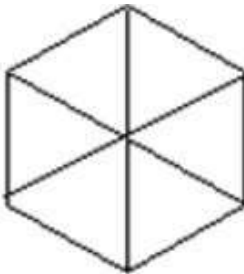


**Ans**

✓ 1.



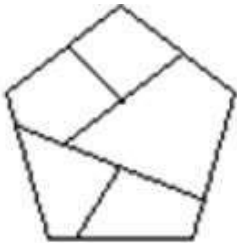
✗ 2.



✗ 3.



✗ 4.



Question ID : 26433083102  
Status : Answered  
Chosen Option : 1

**Q.5** Select the set in which the numbers are related in the same way as are the numbers of the given sets.

(NOTE : Operations should be performed on the whole numbers, without breaking down the numbers into its constituent digits. E.g. 13 – Operations on 13 such as adding /subtracting /multiplying etc. to 13 can be performed. Breaking down 13 into 1 and 3 and then performing mathematical operations on 1 and 3 is not allowed.)  
(16, 32, 54)  
(29, 58, 80)

Ans  1. (17, 35, 59)

 2. (25, 50, 62)

 3. (24, 48, 70)

 4. (23, 46, 62)

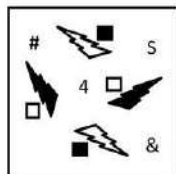
Question ID : 26433057071

Status : Answered

Chosen Option : 3

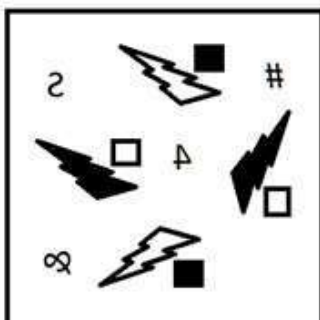


**Q.6** Select the correct mirror image from the following options, when the mirror is placed on the right side of the given figure.




Ans


✗ 1.



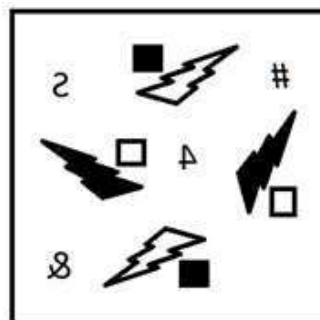
✗ 2.



✗ 3.



✓ 4.



Question ID : 264330103202  
Status : Answered  
Chosen Option : 4

**Q.7** Which of the following numbers will replace the question mark (?) in the given series?  
108, 99, 88, ? , 60, 43

- Ans ☒ 1. 76  
☒ 2. 75  
☒ 3. 78  
☒ 4. 77

Question ID : 26433090926  
Status : Answered  
Chosen Option : 2

**Q.8** Three of the following four letter-clusters are alike in a certain way and one is different.  
Pick the odd one out.

PTXB  
GKOS  
HKNQ  
MQUY

- Ans ☒ 1. PTXB  
☒ 2. MQUY  
☒ 3. GKOS  
☒ 4. HKNQ

Question ID : 26433092612  
Status : Answered  
Chosen Option : 4

**Q.9** Select the set in which the numbers are related in the same way as are the numbers of the following sets.

(NOTE: Operations should be performed on the whole numbers, without breaking down the numbers into its constituent digits. For e.g. 13 – Operations on 13 such as adding/subtracting/multiplying etc. to 13 can be performed. Breaking down 13 into 1 and 3 and then performing mathematical operations on 1 and 3 is not allowed.)

(9, 6, 25)  
(14, 5, 29)

- Ans ☒ 1. (27, 8, 29)  
☒ 2. (18, 4, 42)  
☒ 3. (13, 9, 32)  
☒ 4. (12, 8, 20)

Question ID : 264330131290  
Status : Answered  
Chosen Option : 3

**Q.10** Three statements are given followed by three conclusions numbered I, II and III.  
Assuming the statements to be true, even if they seem to be at variance with commonly known facts, decide which of the conclusions logically follow(s) from the statements.

**Statements:**

All metals are gold.

All jewellery are gold.

All gold are ornaments.

**Conclusions:**

I. Some ornaments are jewellery.

II. Some metals are jewellery.

III. All jewellery are ornaments.

**Ans**  1. Only conclusions I and III follow

 2. All conclusions follow

 3. Only conclusions II and III follow

 4. Only conclusions I and II follow

Question ID : 26433090911

Status : Answered

Chosen Option : 1

**Q.11** Looking at the picture on the wall, he said “My sister-in-law S’s husband Q’s son N had a sister R”. How is S related to R?

**Ans**  1. Daughter

 2. Mother-in-law

 3. Daughter-in-law

 4. Mother

Question ID : 264330122392

Status : Answered

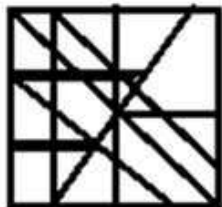
Chosen Option : 4

Q.12 Select the option figure in which the given figure is embedded (rotation is NOT allowed).

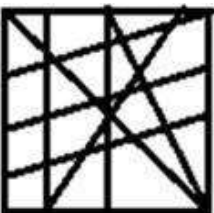


Ans

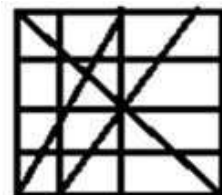
✗ 1.



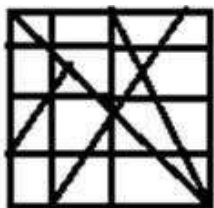
✗ 2.



✓ 3.



✗ 4.



Question ID : 26433067434

Status : Answered

Chosen Option : 3

Q.13 Select the set in which the numbers are related in the same way as are the numbers of the given set.

(NOTE : Operations should be performed on the whole numbers, without breaking down the numbers into its constituent digits. E.g. 13 – Operations on 13 such as adding /subtracting /multiplying etc. to 13 can be performed. Breaking down 13 into 1 and 3 and then performing mathematical operations on 1 and 3 is not allowed.)

(36, 21, 35)

(43, 19, 53)

Ans ✓ 1. (51, 34, 39)

✗ 2. (48, 37, 25)

✗ 3. (44, 20, 54)

✗ 4. (35, 22, 34)

Question ID : 264330134927

Status : Answered

Chosen Option : 1

Q.14 Choose one of the following correct combination of mathematical signs which can be filled sequentially to balance the following equation.

$$28 \text{ } \square \text{ } 4 \text{ } \square \text{ } 3 \text{ } \square \text{ } 9 \text{ } \square \text{ } 42 \text{ } \square \text{ } 12$$

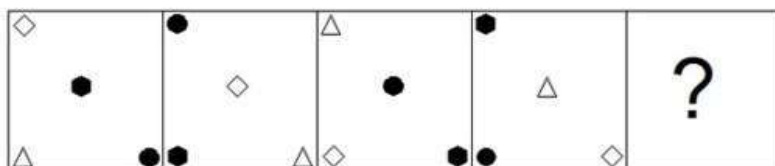
- Ans
- ☒ 1. +, ×, -, =, ×
  - ☒ 2. ÷, ×, =, +, +
  - ☒ 3. ÷, ×, +, =, -
  - ☒ 4. +, =, ÷, ×, +

Question ID : 264330122243

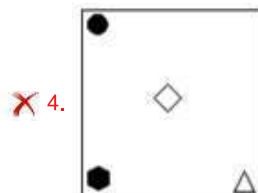
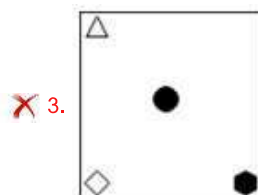
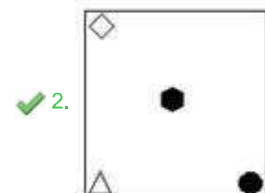
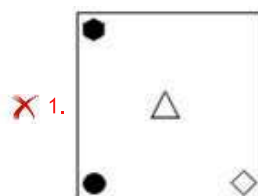
Status : Answered

Chosen Option : 3

Q.15 Select the figure from among the given options that can replace the question mark (?) in the following series.



Ans



Question ID : 264330103133

Status : Answered

Chosen Option : 2

**Q.16** The second number in the given number pairs is obtained by performing certain mathematical operation(s) on the first number. The same operation(s) are followed in all the number pairs, EXCEPT one. Find that odd number pair.

- Ans ☒ 1. (15, 240)  
☒ 2. (13, 180)  
☒ 3. (11, 132)  
☒ 4. (16, 272)

Question ID : 264330143679

Status : Answered

Chosen Option : 2

**Q.17** Select the set in which the numbers are related in the same way as are the numbers of the following sets.

(NOTE : Operations should be performed on the whole numbers, without breaking down the numbers into its constituent digits. E.g. 13 – Operations on 13 such as adding /subtracting /multiplying etc. to 13 can be performed. Breaking down 13 into 1 and 3 and then performing mathematical operations on 1 and 3 is not allowed.)  
(5,32,7)  
(4,30,14)

- Ans ☒ 1. (7, 60, 11)  
☒ 2. (6, 65, 13)  
☒ 3. (7, 50, 21)  
☒ 4. (8, 60, 9)

Question ID : 264330117294

Status : Answered

Chosen Option : 1

**Q.18** Which of the following letter-clusters will replace the question mark (?) in the given series to make it logically complete?  
CXW, EVU, GTS, IRQ, ?

- Ans ☒ 1. NOL  
☒ 2. ONM  
☒ 3. MNO  
☒ 4. KPO

Question ID : 26433069529

Status : Answered

Chosen Option : 4

**Q.19** Each vowel in the word “CAPSULE” is changed to the previous letter in the English alphabetical series and each consonant is changed to the following letter in the English alphabetical series. In the newly formed word, how many alphabets are there in the English alphabetical series between the alphabet which is 3<sup>rd</sup> from the left and 3<sup>rd</sup> from the right?

- Ans ☒ 1. Three  
☒ 2. Four  
☒ 3. One  
☒ 4. Two

Question ID : 264330132070

Status : Answered

Chosen Option : 3

Q.20 'Dog' is related to 'Labrador' in the same way as 'Vegetable' is related to '\_\_\_\_\_'.  
Ans

✓ 1. Capsicum

✗ 2. Pickle

✗ 3. Banana

✗ 4. Apple

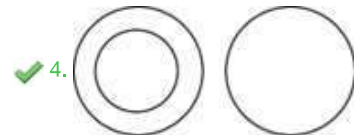
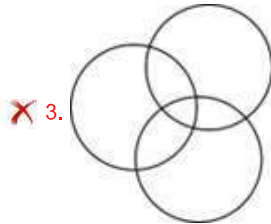
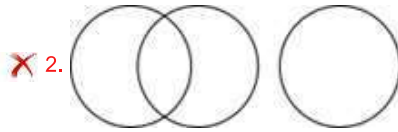
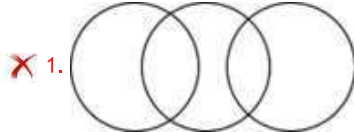
Question ID : 264330101126

Status : Answered

Chosen Option : 1

Q.21 Select the Venn diagram that best illustrates the relationship between the following classes.  
Dubai, Asia, Africa

Ans



Question ID : 264330130729

Status : Answered

Chosen Option : 4

Q.22 Select the option that is related to the fifth letter-cluster in the same way as the second letter-cluster is related to the first letter-cluster and the fourth letter-cluster is related to the third letter-cluster.

BEAUTY : ZVXEJH :: FRAGILE : FNLKFXM :: BEYOND : ?

Ans ✗ 1. EOPZFC

✗ 2. DNOYEB

✗ 3. EPRCEB

✓ 4. EPRCJH

Question ID : 26433090017

Status : Answered

Chosen Option : 4

**Q.23** In a certain code language, if 'CBVQ' is written as '652520' and 'FRJT' is written as '9211323', how will 'EHL P' be written in the same code language?

- Ans  1. 80121421  
 2. 7910520  
 3. 8012514  
 4. 8111519

Question ID : 264330126654  
Status : Answered  
Chosen Option : 4

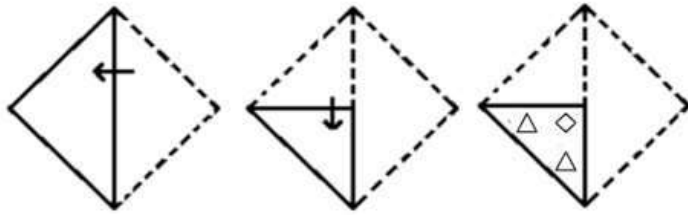
**Q.24** In a certain code language, 'FRISK' is written as 'THLIQ' and 'MOADS' is written as 'QODQB'. How will 'WAGER' be written in that language?

- Ans  1. CUJBC  
 2. CYJBD  
 3. CYJPC  
 4. CUJPG

Question ID : 264330131614  
Status : Answered  
Chosen Option : 3

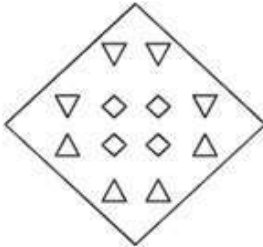


Q.25 A paper is folded and cut as shown below. How will it appear when unfolded?

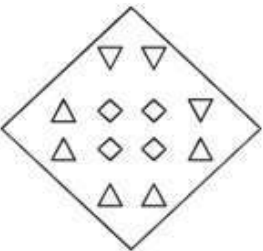


Ans

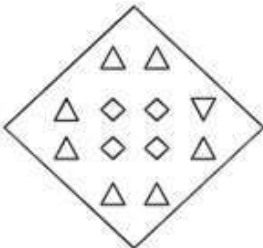
✓ 1.



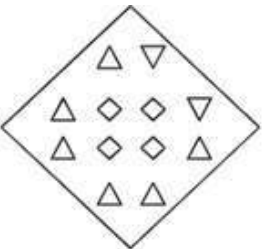
✗ 2.



✗ 3.



✗ 4.



Question ID : 26433080544

Status : Answered

Chosen Option : 1

**Q.1 At which Olympic Games did India win a gold medal for the first time?**

- Ans ☒ 1. 1936 Berlin
- ☒ 2. 1968 Mexico
- ☒ 3. 1928 Amsterdam
- ☒ 4. 1952 Helsinki

Question ID : 264330110344  
Status : Answered  
Chosen Option : 1

**Q.2 Identify the black soil region of India from the following.**

- Ans ☒ 1. Coastal plains
- ☒ 2. Northern plains
- ☒ 3. Deccan trap
- ☒ 4. Himalayas

Question ID : 264330119232  
Status : Answered  
Chosen Option : 3

**Q.3 Who is the first Indian woman to win an Olympic medal?**

- Ans ☒ 1. Mirabai Chanu
- ☒ 2. PV Sindhu
- ☒ 3. Saina Nehwal
- ☒ 4. Karnam Malleswari

Question ID : 26433055189  
Status : Answered  
Chosen Option : 4

**Q.4 Which of the following statements are correct regarding the Union Public Service Commission?**

- A. The Parliament has the power to make regulations as to conditions of service of the Chairman, members and staff of the commission.
- B. The Government of India Act, 1935, envisaged a Public Service Commission for the Federation and a Provincial Public Service Commission for each Province or group of Provinces.
- C. The Federal Public Service Commission came to be known as the Union Public Service Commission by virtue of Clause (1) of Article 378 of the Constitution in 1950.

- Ans ☒ 1. A and B only
- ☒ 2. A, B and C
- ☒ 3. B and C only
- ☒ 4. A and C only

Question ID : 264330114770  
Status : Answered  
Chosen Option : 1

**Q.5 Which Article of the Indian Constitution talks about 'abolition of title'?**

Ans ☒ 1. Article 18

☐ 2. Article 20

☐ 3. Article 19

☐ 4. Article 17

Question ID : 264330144219

Status : Answered

Chosen Option : 1

**Q.6 What is humidity?**

Ans ☐ 1. When the water vapour transfers into water from air

☒ 2. When water vapour is present in the air

☐ 3. When the other gases transfer to air

☐ 4. When air is present in the water

Question ID : 264330111564

Status : Answered

Chosen Option : 2

**Q.7 The authorities of which country denied the permission to land the ship Komagata Maru, carrying Indians?**

Ans ☐ 1. New Zealand

☐ 2. America

☐ 3. Australia

☒ 4. Canada

Question ID : 264330132671

Status : Answered

Chosen Option : 1

**Q.8 During which festival is Garba performed?**

Ans ☐ 1. Pongal

☒ 2. Navratri

☐ 3. Diwali

☐ 4. Bihu

Question ID : 264330109280

Status : Answered

Chosen Option : 2

**Q.9** In December 2021, the Supreme Court suspended OBC quotas for local body elections in which of the following states?

- Ans ☒ 1. West Bengal and Odisha  
☒ 2. Maharashtra and Madhya Pradesh  
☒ 3. Bihar and Uttar Pradesh  
☒ 4. Andhra Pradesh and Karnataka

Question ID : 26433074184  
Status : Answered  
Chosen Option : 4

**Q.10** This festival was started by the Government of Nagaland in 2000 to encourage interaction among tribes and to promote the cultural heritage of the State. Identify the festival.

- Ans ☒ 1. Hornbill festival  
☒ 2. Nazu festival  
☒ 3. Gaan-Ngai festival  
☒ 4. Nuakhai festival

Question ID : 264330111138  
Status : Answered  
Chosen Option : 1

**Q.11** How many industries were listed in Schedule A of Industrial Policy, 1956?

- Ans ☒ 1. 16  
☒ 2. 17  
☒ 3. 10  
☒ 4. 12

Question ID : 264330109391  
Status : Not Answered  
Chosen Option : --

**Q.12** Identify the option that arranges the following neighbouring countries of India according to their Human Development Index (HDI) ranks in 2021-22 in increasing order.

- a) Sri Lanka  
b) Maldives  
c) Bhutan  
d) Bangladesh

- Ans ☒ 1. b-a-d-c  
☒ 2. a-b-c-d  
☒ 3. b-a-c-d  
☒ 4. a-b-d-c

Question ID : 264330109523  
Status : Answered  
Chosen Option : 1

**Q.13 Asansol, Howrah, Malda and Sealdah division come under which railway zone of India?**

- Ans ☒ 1. West Central Railway  
☒ 2. Northern Railway  
☒ 3. Central Railway  
☒ 4. Eastern Railway

Question ID : 264330111321  
Status : Answered  
Chosen Option : 4

**Q.14 What cells help in osmoregulation in platyhelminthes?**

- Ans ☒ 1. Nerve cells  
☒ 2. Flame cells  
☒ 3. Ganglia  
☒ 4. Hooks

Question ID : 264330134873  
Status : Answered  
Chosen Option : 2

**Q.15 Who became the first woman officer to join Army Aviation Corps as Combat Aviator after the successful completion of training in May 2022?**

- Ans ☒ 1. Captain Abhilasha Barak  
☒ 2. Captain Shiva Chauhan  
☒ 3. Captain Gursimran Kaur  
☒ 4. Captain Manju Sharma

Question ID : 264330132599  
Status : Answered  
Chosen Option : 1

**Q.16 Malik Ambar, who resisted Mughals in Deccan, was an able administrator of which state?**

- Ans ☒ 1. Bidar  
☒ 2. Bijapur  
☒ 3. Golconda  
☒ 4. Ahmednagar

Question ID : 264330110202  
Status : Answered  
Chosen Option : 2

**Q.17 Who among the following is associated with the musical instrument Surbahar?**

- Ans ☒ 1. Annapurna Devi  
☐ 2. Shiv Kumar Sharma  
☐ 3. Sharan Rani  
☐ 4. Bhajan Sopari

Question ID : 264330131306  
Status : Not Answered  
Chosen Option : --

**Q.18 President Ram Nath Kovind conferred which award on Matha B Manjamma for Jogati Nrithyaa in 2021?**

- Ans ☐ 1. Padma Bhushan  
☒ 2. Padma Shri  
☐ 3. Padma Vibhushan  
☐ 4. Sangeet Natak Akademi

Question ID : 26433055423  
Status : Not Answered  
Chosen Option : --

**Q.19 Who among the following sportspersons was awarded the Chhattisgarh Veer Award 2021?**

- Ans ☐ 1. Shikhar Dhawan  
☐ 2. Bajrang Punia  
☒ 3. Dutee Chand  
☐ 4. P V Sindhu

Question ID : 26433082839  
Status : Answered  
Chosen Option : 3

**Q.20 Ferns, horsetails and lycophytes belong to which of the following groups?**

- Ans ☐ 1. Bryophyta  
☒ 2. Pteridophyta  
☐ 3. Algae  
☐ 4. Fungi

Question ID : 26433082206  
Status : Answered  
Chosen Option : 1

Q.21 The Ashtadhyayi of Panini is a renowned work on \_\_\_\_\_.

- Ans
- ☒ 1. Mauryan Polity
  - ☒ 2. Gupta Administration
  - ☒ 3. Medicine
  - ☒ 4. Sanskrit Grammar

Question ID : 264330114060  
Status : Answered  
Chosen Option : 4

Q.22 Which of the following statements is NOT correct about surface tension?

- Ans
- ☒ 1. Surface tension is typically measured in dynes/cm.
  - ☒ 2. The shape of water drop is spherical due to surface tension.
  - ☒ 3. At room temperature, surface tension of water is less than ethyl alcohol.
  - ☒ 4. The cohesive forces between liquid molecules are responsible for the phenomenon known as surface tension.

Question ID : 264330131766  
Status : Answered  
Chosen Option : 3

Q.23  $M_2$  is one of the measures of money supply.  $M_2$  is the sum of  $M_1$  + \_\_\_\_\_.

- Ans
- ☒ 1. saving deposits with post office
  - ☒ 2. National Saving Certificates
  - ☒ 3. coins and currency notes
  - ☒ 4. demand deposits

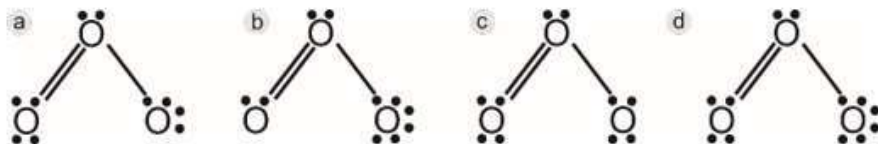
Question ID : 26433066576  
Status : Answered  
Chosen Option : 3

Q.24 In which year was the Vernacular Press Act enacted in British India?

- Ans
- ☒ 1. 1876
  - ☒ 2. 1874
  - ☒ 3. 1872
  - ☒ 4. 1878

Question ID : 264330106608  
Status : Answered  
Chosen Option : 3

Q.25 Which of the following is the correct Lewis structure of  $O_3$ ?



Ans   
☒ 1. c   
☒ 2. a   
☒ 3. b   
☒ 4. d

Question ID : 26433066639   
 Status : Answered   
 Chosen Option : 3

Section : Quantitative Aptitude

Q.1 The cube of the difference between two given natural numbers is 1728, while the product of these two given numbers is 108. Find the sum of the cubes of these two given numbers.

Ans   
☒ 1. 6048   
☒ 2. 5616   
☒ 3. 6024   
☒ 4. 5832

Question ID : 264330114558   
 Status : Answered   
 Chosen Option : 1

Q.2 30 men can complete a work in 12 days. After 6 days, 24 more men joined them. How many days will they now take to complete the remaining work?

Ans   
☒ 1.  $3\frac{1}{3}$  days   
☒ 2.  $3\frac{2}{3}$  days   
☒ 3.  $3\frac{1}{2}$  days   
☒ 4.  $2\frac{1}{3}$  days

Question ID : 264330143491   
 Status : Answered   
 Chosen Option : 1



**Q.3** A thief is spotted by a policeman from a distance of 400m. When the policeman starts chasing, the thief also starts running. If the speed of the thief is 32km/h and that of the policeman is 40 km/h, then how far would the thief have run before he is overtaken?

- Ans
- ☒ 1. 1500m
  - ☒ 2. 1000m
  - ☒ 3. 1200m
  - ☒ 4. 1600m

Question ID : 264330103426

Status : Answered

Chosen Option : 4

**Q.4** The cube of the difference between two given natural numbers is 1728, while the product of these two given numbers is 108. Find the positive difference between the cubes of these two given numbers.

- Ans
- ☒ 1. 4104
  - ☒ 2. 5616
  - ☒ 3. 2160
  - ☒ 4. 5626

Question ID : 264330101346

Status : Answered

Chosen Option : 2

**Q.5** Study the following table and answer the question below.

School name	Total number of students enrolled	Percentage of enrolled students who opted for Biology	Ratio of male to female students who opted for Biology
A	900	30%	7:8
B	400	38%	9:10
C	1000	24%	5:19
D	800	18%	5:7

What is the ratio of the total number of male students to that of female students who opted for Biology in schools A and D together?

- Ans
- ☒ 1. 38:31
  - ☒ 2. 21:38
  - ☒ 3. 31:28
  - ☒ 4. 31:38

Question ID : 264330103828

Status : Answered

Chosen Option : 4

**Q.6** A conical tent of height 10m and base diameter 48m was erected by a company in a park. Find the curved surface area of the tent (in  $\text{m}^2$ ).

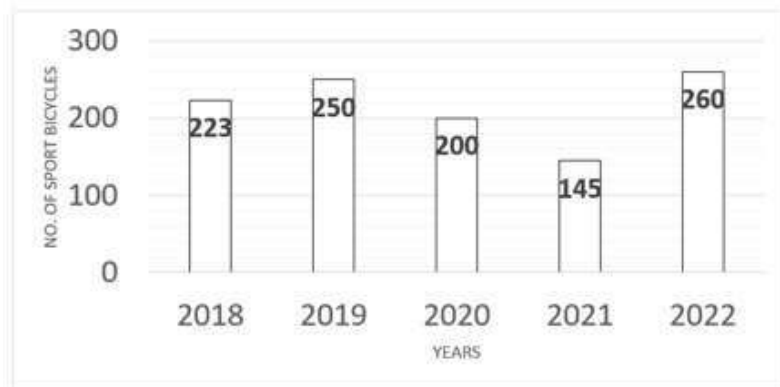
- Ans
- ☒ 1.  $576\pi$
  - ☒ 2.  $1248\pi$
  - ☒ 3.  $1152\pi$
  - ☒ 4.  $624\pi$

Question ID : 264330103436

Status : Answered

Chosen Option : 4

**Q.7** The number of sport bicycles sold by a shopkeeper in five years is shown in the following bar graph.



What is the percentage of decrease in the sale of sport bicycles in the year 2021 over that in the previous year?

- Ans
- ☐ 1. 27.0%
  - ☐ 2. 26.5%
  - ☐ 3. 26.0%
  - ☒ 4. 27.5%

Question ID : 264330131482

Status : Answered

Chosen Option : 4

**Q.8**

Using trigonometric formulas, find the value of  $\left(\frac{\sin(x-y)}{\sin(x+y)}\right)\left(\frac{\tan x + \tan y}{\tan x - \tan y}\right)$

- Ans
- ☐ 1. -2
  - ☐ 2. 2
  - ☐ 3. 0
  - ☒ 4. 1

Question ID : 26433075780

Status : Answered

Chosen Option : 4

**Q.9**

Simplify the given expression.

$$\frac{(326 + 222)^2 - (326 - 222)^2}{(326 \times 222)}$$

- Ans
- ☐ 1. 1
  - ☒ 2. 4
  - ☐ 3. 3
  - ☐ 4. 2

Question ID : 264330126540

Status : Answered

Chosen Option : 2

Q.10 The third proportional to  $(x^2 - y^2)$  and  $(x - y)$  is:

Ans ☒ 1.  $(x - y)$

☒ 2.  $\frac{x - y}{x + y}$

☒ 3.  $\frac{x + y}{x - y}$

☒ 4.  $(x + y)$

Question ID : 264330104515

Status : Answered

Chosen Option : 2

Q.11 A shopkeeper offers the following two discount schemes.

A) Two successive discounts of 10% and 15%

B) Buy 5 get 2 free.

Which scheme has the maximum discount percentage?

Ans ☒ 1. B does not give any discount

☒ 2. B

☒ 3. A and B both have the same discount percentage

☒ 4. A

Question ID : 264330104249

Status : Answered

Chosen Option : 2

Q.12 A can finish a work in 20 days and B can complete the same work in 15 days. B worked for 9 days and left the job. In how many days can A alone finish the remaining work?

Ans ☒ 1. 10 days

☒ 2. 8 days

☒ 3. 9 days

☒ 4. 7 days

Question ID : 264330126591

Status : Answered

Chosen Option : 2

Q.13 Two trains P and Q of lengths 320 m and 540 m, respectively, are running in the same direction on parallel tracks at 108 km/h and 144 km/h, respectively. How much time will the trains take to cross each other completely?

Ans ☒ 1. 86 s

☒ 2. 54 s

☒ 3. 32 s

☒ 4. 68 s

Question ID : 26433097579

Status : Answered

Chosen Option : 1

Q.14 10 men can do a work in 25 days. After 12 days of work, 3 more men were engaged to finish the work. The number of days required to complete the remaining work is:

Ans ☒ 1. 10

☐ 2. 8

☐ 3. 6

☐ 4. 12

Question ID : 264330129450

Status : Answered

Chosen Option : 1

Q.15 If the simple interest for 5 years is equal to 25% of the principal, then the interest will be equal to the principal after \_\_\_\_\_ years.

Ans ☒ 1. 20

☐ 2. 30

☐ 3. 25

☐ 4. 22

Question ID : 264330108887

Status : Answered

Chosen Option : 1

Q.16 Which of the following numbers will completely divide  $4^{12} + 4^{13} + 4^{14} + 4^{15}$ ?

Ans ☐ 1. 3

☐ 2. 7

☐ 3. 11

☒ 4. 17

Question ID : 264330145552

Status : Answered

Chosen Option : 4

Q.17 If  $\cot A = \frac{12}{5}$ , then the value of  $(\sin A + \cos A) \times \operatorname{cosec} A$  is \_\_\_\_\_.

Ans ☐ 1.  $\frac{13}{5}$

☒ 2.  $\frac{17}{5}$

☐ 3.  $\frac{14}{5}$

☐ 4. 1

Question ID : 264330143567

Status : Answered

Chosen Option : 2

**Q.18** Raj's income is ₹45,000 and his expenditure is ₹33,000. If his income is increased by 20% and expenditure by 12%, then what will be the percentage increase in saving?

- Ans ☐ 1. 48%
- ☐ 2. 56%
- ☐ 3. 36%
- ☒ 4. 42%

Question ID : 264330126566  
Status : Answered  
Chosen Option : 4

**Q.19** Which of the following numbers is divisible by 24?

- Ans ☐ 1. 52668
- ☒ 2. 49512
- ☐ 3. 64760
- ☐ 4. 26968

Question ID : 264330131114  
Status : Answered  
Chosen Option : 2

**Q.20** The average weight of a team of 20 people was calculated to be 59.8 kg and it was later discovered that one weight was misread as 68 kg instead of 77 kg. The correct average weight is:

- Ans ☐ 1. 70.25 kg
- ☐ 2. 61.25 kg
- ☒ 3. 60.25 kg
- ☐ 4. 60.50 kg

Question ID : 264330130911  
Status : Answered  
Chosen Option : 3

**Q.21** Let A, B, C be the mid-points of sides PQ, QR PR, respectively, of  $\triangle PQR$ . If the area of  $\triangle PQR$  is  $32\text{cm}^2$ , then find the area of  $\triangle ABC$ .

- Ans ☐ 1.  $24\text{ cm}^2$
- ☐ 2.  $16\text{ cm}^2$
- ☐ 3.  $32\text{ cm}^2$
- ☒ 4.  $8\text{ cm}^2$

Question ID : 264330143528  
Status : Answered  
Chosen Option : 4

Q.22 Two concentric circles of radii 15 cm and 13 cm are given. Find the length of the chord of the larger circle which touches the smaller circle.

- Ans
- ☒ 1.  $22\sqrt{7}$
  - ☒ 2.  $8\sqrt{14}$
  - ☒ 3.  $4\sqrt{14}$
  - ☒ 4.  $12\sqrt{7}$

Question ID : 26433076407  
Status : Answered  
Chosen Option : 3

Q.23 On purchase of articles worth ₹10,000, a shopkeeper offers a flat discount of ₹500 to his customers. Further, by shopping using a credit card, he gives an additional discount of 7%. If a customer purchases article worth Rs.10000 using a credit card, then how much is he/she required to pay?

- Ans
- ☒ 1. ₹8,835
  - ☒ 2. ₹9,000
  - ☒ 3. ₹8,815
  - ☒ 4. ₹9,300

Question ID : 26433091540  
Status : Answered  
Chosen Option : 1

Q.24 If  $\tan \frac{A}{2} = x$ , then find x.

- Ans
- ☒ 1.  $\frac{\sqrt{1 + \cos A}}{\sqrt{1 - \cos A}}$
  - ☒ 2.  $\frac{\sqrt{1 - \sin A}}{\sqrt{1 + \cos A}}$
  - ☒ 3.  $\frac{\sqrt{1 - \cos A}}{\sqrt{1 + \cos A}}$
  - ☒ 4.  $\frac{\sqrt{\cos A - 1}}{\sqrt{1 + \cos A}}$

Question ID : 264330122105  
Status : Answered  
Chosen Option : 3

**Q.25** Two circles of radii 10 cm and 5 cm touch each other externally at a point A. PQ is the direct common tangent of those two circles of centres  $O_1$  and  $O_2$ , respectively. The length of PQ is equal to:

- Ans
- ☒ 1.  $10\sqrt{2}$  cm
  - ☐ 2.  $8\sqrt{2}$  cm
  - ☐ 3.  $9\sqrt{2}$  cm
  - ☐ 4.  $6\sqrt{2}$  cm

Question ID : 264330143546  
Status : Answered  
Chosen Option : 1

Section : English Comprehension

**Q.1** Select the most appropriate option that can substitute the underlined word in the given sentence.

Last week's rain ravaged the whole city.

- Ans
- ☐ 1. reaffirmed
  - ☐ 2. rescinded
  - ☒ 3. ruined
  - ☐ 4. retracted

Question ID : 26433092067  
Status : Answered  
Chosen Option : 3

**Q.2** Select the most appropriate option that can substitute the underlined segment in the given sentence.

National development is defined as an improvement in people's daily arrangements, the provision of fundamental necessities to citizens such as food, education, social services, medical help, and so on, as well as an increase in per capita income.

- Ans
- ☐ 1. diving techniques
  - ☐ 2. dining categories
  - ☐ 3. existing calamities
  - ☒ 4. living conditions

Question ID : 26433098912  
Status : Answered  
Chosen Option : 4

**Q.3** Select the word with the correct spelling from the options given below to fill in the blank.

They saw the beautiful \_\_\_\_\_ of the Gods in the Temples.

Ans ☒ 1. Idols

☒ 2. Idoles

☒ 3. Ideals

☒ 4. Idles

Question ID : 264330100242

Status : Answered

Chosen Option : 1

**Q.4** Select the most appropriate option that can substitute the underlined words in the given sentence.

The traffic sergeant proved through the test that Raj was under the influence of drugs and alcohol.

Ans ☒ 1. inebriated

☒ 2. simonised

☒ 3. ponied

☒ 4. pocked

Question ID : 26433086503

Status : Answered

Chosen Option : 1

**Q.5** Select the option that expresses the given sentence in passive voice.

He does not buy shirts.

Ans ☒ 1. Shirts are not bought by him.

☒ 2. Shirts are not brought by him.

☒ 3. Shirts were not been bought by him.

☒ 4. Shirts were not bought by him.

Question ID : 264330121856

Status : Answered

Chosen Option : 1

**Q.6** Identify the sentence that correctly uses the indefinite article.

Ans ☒ 1. She purchased a apple in the market with me.

☒ 2. She purchased an apple in the market with me.

☒ 3. She purchased apple in the market with me.

☒ 4. She purchase a apple in the market with me.

Question ID : 26433072038

Status : Answered

Chosen Option : 2



**Q.7** Select the option that expresses the given sentence in passive voice.  
She is building a new house.

- Ans ☒ 1. A new house is being built by her.
- ☐ 2. She had built a new house.
- ☐ 3. She has built a new house.
- ☐ 4. A new house has been built by her.

Question ID : 264330133297  
Status : Answered  
Chosen Option : 1

**Q.8** Select the most appropriate synonym of the underlined word.

The company was engaged in spurious trade practices.

- Ans ☐ 1. Effective
- ☒ 2. Fraudulent
- ☐ 3. Spacious
- ☐ 4. Trendy

Question ID : 26433091816  
Status : Answered  
Chosen Option : 2

**Q.9** Select the most appropriate synonym of the given word.  
Intriguing

- Ans ☐ 1. Glorifying
- ☐ 2. Ravishing
- ☐ 3. Stunning
- ☒ 4. Interesting

Question ID : 26433091738  
Status : Answered  
Chosen Option : 4

**Q.10** The following sentence has been divided into parts. One of them may contain an error.  
Select the part that contains the error from the given options. If you don't find any error, mark 'No error' as your answer.

Sajni had / interfere in / this matter.

- Ans ☒ 1. interfere in
- ☐ 2. No error
- ☐ 3. this matter
- ☐ 4. Sajni had

Question ID : 26433073529  
Status : Answered  
Chosen Option : 1

**Q.11** Sentences of a paragraph are given below. While the first and the last sentences (S1 and S6) are in the correct order, the sentences in between are jumbled up and named P, Q, R, S. Arrange the sentences in the correct order to form a meaningful and coherent paragraph.

(S1) Today, the world has become a much smaller place, thanks to the adventures and miracles of science.

(P) We are slowly realising that the world is a single cooperative group.

(Q) Other religions have become forces with which we have to reckon, and we are seeking for ways and means by which we can live together in peace and harmony.

(R) Mingling of population is bringing about interchange of thought.

(S) Foreign nations have become our next-door neighbours.

(S6) We cannot have religious unity and peace so long as we assert that we are in possession of the light and all others are groping in the darkness.

Ans ☒ 1. S, R, P, Q

☐ 2. P, Q, R, S

☐ 3. S, R, Q, P

☐ 4. Q, R, S, P

Question ID : 26433073268

Status : Answered

Chosen Option : 1

**Q.12** Select the most appropriate meaning of the given idiom.

Bad iron

Ans ☐ 1. No steam

☐ 2. Not hot

☒ 3. Bad luck

☐ 4. Bad behaviour

Question ID : 26433089730

Status : Answered

Chosen Option : 4

**Q.13** Select the sentences that contains no spelling errors.

Ans ☐ 1. The mall road of our city is always teyming with street vendors.

☐ 2. The mall road of our city is always tiiming with street vendors.

☐ 3. The mall road of our city is always tyiming with street vendors.

☒ 4. The mall road of our city is always teeming with street vendors.

Question ID : 26433070697

Status : Answered

Chosen Option : 4

**Q.14** Select the most appropriate synonym of the underlined word in the following sentence.

I always enjoy the company of respectful teachers.

- Ans
- ☒ 1. admiring
  - ☒ 2. derogatory
  - ☒ 3. dutiful
  - ☒ 4. insolent

Question ID : 26433066419

Status : Answered

Chosen Option : 1

**Q.15** Select the option that can be used as a one-word substitute for the given group of words.

A sentimental memory of the past

- Ans
- ☒ 1. Hysteria
  - ☒ 2. Nostalgia
  - ☒ 3. Mania
  - ☒ 4. Euphoria

Question ID : 26433073967

Status : Answered

Chosen Option : 2

**Q.16** Select the most appropriate idiom or phrase to fill in the blank in the given sentence.

Sweety has been \_\_\_\_\_ since her painting won first prize.

- Ans
- ☒ 1. walking on eggshells
  - ☒ 2. waiting in the wings
  - ☒ 3. walking into the lion's den
  - ☒ 4. walking on air

Question ID : 26433092311

Status : Answered

Chosen Option : 4

**Q.17** Select the most appropriate synonym of the word given in brackets to fill in the blank.

He became \_\_\_\_\_ (verbose) after a few drinks.

- Ans
- ☒ 1. aggressive
  - ☒ 2. decisive
  - ☒ 3. exhaustive
  - ☒ 4. talkative

Question ID : 264330141153

Status : Answered

Chosen Option : 4

**Q.18** Select the option that can be used as a one-word substitute for the given group of words.

A large number of fish swimming together

Ans ☒ 1. Shoal

☐ 2. Stream

☐ 3. Sheaf

☐ 4. String

Question ID : 26433074038

Status : Answered

Chosen Option : 1

**Q.19** Select the most appropriate ANTONYM of the given word.  
Eloquent

Ans ☐ 1. Modest

☐ 2. Crucial

☒ 3. Impotent

☐ 4. Humble

Question ID : 264330132803

Status : Answered

Chosen Option : 2

**Q.20** Select the most appropriate option to fill in the blanks.

As cattle are to herd so are birds to \_\_\_\_\_.

Ans ☒ 1. flock

☐ 2. litter

☐ 3. pack

☐ 4. streak

Question ID : 26433073260

Status : Answered

Chosen Option : 1

**Comprehension:**

In the following passage some words have been deleted. Fill in the blanks with the help of the alternatives given. Select the most appropriate option for each number.

All state universities and colleges in Uttar Pradesh, one of the (1) \_\_\_\_\_ in India, will now (2) \_\_\_\_\_ a "save water" ritual named 'Jal Bharo' in place of 'lamp lighting' to inaugurate their annual convocations. The governor of the state, who is also chancellor of state universities, instructed that every university and college in the state should install rainwater harvesting plants on its campus. 'Jal Bharo' signifies (3) \_\_\_\_\_ the vision of 'Jal Shakti'. This ceremony symbolises the (4) \_\_\_\_\_ importance of water conservation, whereas the lamp lighting ceremony symbolised removing darkness through education and spreading the light of learning. It is really a (5) \_\_\_\_\_ initiative. Every educational institute in India should ensure to save and recharge groundwater by installing rainwater harvesting plants. These kinds of initiatives provide awareness of using and saving water, the elixir of life.

**SubQuestion No : 21**

**Q.21** Select the most appropriate option to fill in blank no. 1.

- Ans  1. more big states  
 2. big state  
 3. biggest states  
 4. bigger state

Question ID : 264330139162

Status : Answered

Chosen Option : 3





**Comprehension:**

In the following passage some words have been deleted. Fill in the blanks with the help of the alternatives given. Select the most appropriate option for each number.

All state universities and colleges in Uttar Pradesh, one of the (1) \_\_\_\_\_ in India, will now (2) \_\_\_\_\_ a "save water" ritual named 'Jal Bharo' in place of 'lamp lighting' to inaugurate their annual convocations. The governor of the state, who is also chancellor of state universities, instructed that every university and college in the state should install rainwater harvesting plants on its campus. 'Jal Bharo' signifies (3) \_\_\_\_\_ the vision of 'Jal Shakti'. This ceremony symbolises the (4) \_\_\_\_\_ importance of water conservation, whereas the lamp lighting ceremony symbolised removing darkness through education and spreading the light of learning. It is really a (5) \_\_\_\_\_ initiative. Every educational institute in India should ensure to save and recharge groundwater by installing rainwater harvesting plants. These kinds of initiatives provide awareness of using and saving water, the elixir of life.

**SubQuestion No : 22**

**Q.22** Select the most appropriate option to fill in blank no. 2.

- Ans  1. organise  
 2. organising  
 3. have managed  
 4. managing

Question ID : 264330139163

Status : Answered

Chosen Option : 1





**Comprehension:**

In the following passage some words have been deleted. Fill in the blanks with the help of the alternatives given. Select the most appropriate option for each number.

All state universities and colleges in Uttar Pradesh, one of the (1) \_\_\_\_\_ in India, will now (2) \_\_\_\_\_ a "save water" ritual named 'Jal Bharo' in place of 'lamp lighting' to inaugurate their annual convocations. The governor of the state, who is also chancellor of state universities, instructed that every university and college in the state should install rainwater harvesting plants on its campus. 'Jal Bharo' signifies (3) \_\_\_\_\_ the vision of 'Jal Shakti'. This ceremony symbolises the (4) \_\_\_\_\_ importance of water conservation, whereas the lamp lighting ceremony symbolised removing darkness through education and spreading the light of learning. It is really a (5) \_\_\_\_\_ initiative. Every educational institute in India should ensure to save and recharge groundwater by installing rainwater harvesting plants. These kinds of initiatives provide awareness of using and saving water, the elixir of life.

**SubQuestion No : 23**

**Q.23** Select the most appropriate option to fill in blank no. 3.

- Ans  1. holding  
 2. proceeding  
 3. moving  
 4. strengthening

Question ID : 264330139164

Status : Answered

Chosen Option : 4

**Comprehension:**

In the following passage some words have been deleted. Fill in the blanks with the help of the alternatives given. Select the most appropriate option for each number.

All state universities and colleges in Uttar Pradesh, one of the (1) \_\_\_\_\_ in India, will now (2) \_\_\_\_\_ a "save water" ritual named 'Jal Bharo' in place of 'lamp lighting' to inaugurate their annual convocations. The governor of the state, who is also chancellor of state universities, instructed that every university and college in the state should install rainwater harvesting plants on its campus. 'Jal Bharo' signifies (3) \_\_\_\_\_ the vision of 'Jal Shakti'. This ceremony symbolises the (4) \_\_\_\_\_ importance of water conservation, whereas the lamp lighting ceremony symbolised removing darkness through education and spreading the light of learning. It is really a (5) \_\_\_\_\_ initiative. Every educational institute in India should ensure to save and recharge groundwater by installing rainwater harvesting plants. These kinds of initiatives provide awareness of using and saving water, the elixir of life.

**SubQuestion No : 24**

**Q.24** Select the most appropriate option to fill in blank no. 4.

- Ans  1. sheer  
 2. complete  
 3. immense  
 4. total

Question ID : 264330139165

Status : Answered

Chosen Option : 3

**Comprehension:**

In the following passage some words have been deleted. Fill in the blanks with the help of the alternatives given. Select the most appropriate option for each number.

All state universities and colleges in Uttar Pradesh, one of the (1) \_\_\_\_\_ in India, will now (2) \_\_\_\_\_ a "save water" ritual named 'Jal Bharo' in place of 'lamp lighting' to inaugurate their annual convocations. The governor of the state, who is also chancellor of state universities, instructed that every university and college in the state should install rainwater harvesting plants on its campus. 'Jal Bharo' signifies (3) \_\_\_\_\_ the vision of 'Jal Shakti'. This ceremony symbolises the (4) \_\_\_\_\_ importance of water conservation, whereas the lamp lighting ceremony symbolised removing darkness through education and spreading the light of learning. It is really a (5) \_\_\_\_\_ initiative. Every educational institute in India should ensure to save and recharge groundwater by installing rainwater harvesting plants. These kinds of initiatives provide awareness of using and saving water, the elixir of life.

**SubQuestion No : 25**

**Q.25** Select the most appropriate option to fill in blank no. 5.

Ans  1. laudable

 2. louder

 3. labelled

 4. lower

Question ID : 264330139166

Status : Answered

Chosen Option : 1

## Combined Graduate level Examination 2023 Tier I

Roll Number	
Candidate Name	
Venue Name	ION Digital Zone iDZ Tatisilwai
Exam Date	18/07/2023
Exam Time	11:45 AM - 12:45 PM
Subject	Combined Graduate Level Examination Tier I 2023

Section : General Intelligence and Reasoning

**Q.1** Select the option that is related to the third word in the same way as the second word is related to the first word.

(The words must be considered as meaningful English words and must not be related to each other based on the number of letters/number of consonants/vowels in the word.)

Weight : Pounds :: Height : ?

- Ans
- ☒ 1. Dozen
  - ☒ 2. Metres
  - ☒ 3. High
  - ☒ 4. Kilograms

Question ID : 26433087262

Status : Answered

Chosen Option : 2

**Q.2** Select the correct combination of mathematical signs that can sequentially replace the \* signs and balance the given equation.

$$55 * 63 * 9 * 8 * 3 = 38$$

- Ans
- ☒ 1. + × - +
  - ☒ 2. × + + -
  - ☒ 3. + - × ÷
  - ☒ 4. + ÷ - ×

Question ID : 264330122473

Status : Answered

Chosen Option : 4

**Q.3** The second number in the given number pairs is obtained by performing certain mathematical operation(s) on the first number. The same operation(s) are followed in all the number pairs except one. Find that odd number pair.

- Ans
- ☒ 1. 81 : 19
  - ☒ 2. 121 : 23
  - ☒ 3. 1 : 3
  - ☒ 4. 64 : 9

Question ID : 264330143694

Status : Answered

Chosen Option : 4



Q.4 F is C's son. C is the only daughter of B. D is A's only son-in-law. B is C's father. A is B's wife. How is D related to F?

- Ans ☒ 1. Brother-in-law  
☒ 2. Father  
☒ 3. Father-in-law  
☒ 4. Brother

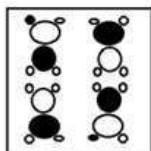
Question ID : 264330122391

Status : Answered

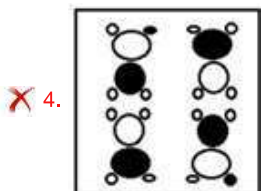
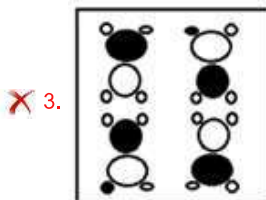
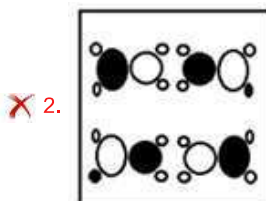
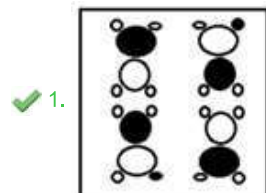
Chosen Option : 2

Q.5 Which of the answer figures is the exact mirror image of the given problem figure when the mirror is held at the right side?

Problem figure:



Ans



Question ID : 26433067403

Status : Answered

Chosen Option : 1

**Q.6** Three statements are given followed by three conclusions numbered I, II and III.  
Assuming the statements to be true, even if they seem to be at variance with commonly known facts, decide which of the conclusions logically follow(s) from the statements.

**Statements:**

All fruits are wines.

Some wines are juices.

All juices are alcohols.

**Conclusions:**

I. Some alcohols are juices.

II. Some wines are alcohols.

III. Some wines are fruits.

- Ans** ☒ 1. Only conclusions I and II follow
- ☒ 2. All conclusions follow
- ☒ 3. Only conclusions I and III follow
- ☒ 4. Only conclusions II and III follow

Question ID : 264330143740

Status : Answered

Chosen Option : 2

**Q.7** Study the given pattern carefully and select the number that can replace the question mark (?) in it.

(5, 19, 4)

(1, 7, 4)

(6, ?, 1)

(NOTE: Operations should be performed on the whole numbers, without breaking down the numbers into its constituent digits. E.g. 13 – Operations on 13 such as adding/subtracting/multiplying etc. to 13 can be performed. Breaking down 13 into 1 and 3 and then performing mathematical operations on 1 and 3 is not allowed)

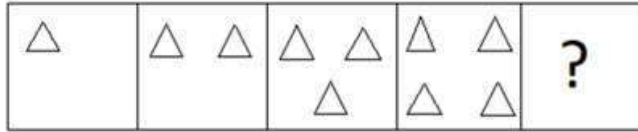
- Ans** ☒ 1. 7
- ☒ 2. 9
- ☒ 3. 19
- ☒ 4. 13

Question ID : 26433082459

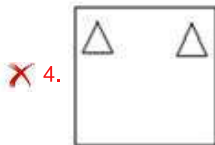
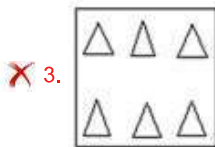
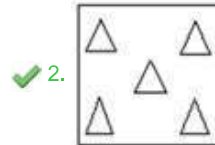
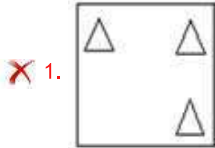
Status : Answered

Chosen Option : 3

**Q.8** Select the figure from among the given options that can replace the question mark (?) in the following series.



Ans



Question ID : 26433087149

Status : Answered

Chosen Option : 2

**Q.9** Select the option that represents the correct order of the given words as they would appear in an English dictionary.

1. Believe
2. Breathe
3. Bereave
4. Blight
5. Brave
6. Banter

Ans ✓ 1. 6, 1, 3, 4, 5, 2

✗ 2. 6, 3, 1, 4, 5, 2

✗ 3. 6, 1, 4, 3, 5, 2

✗ 4. 6, 4, 1, 5, 3, 2

Question ID : 264330129463

Status : Answered

Chosen Option : 1

**Q.10** Select the word-pair that best represents a similar relationship to the one expressed in the pair of words given below.  
King : Palace

- Ans  1. Bee : Honey  
 2. Nun : Convent  
 3. Ice : Igloo  
 4. Horse : Den

Question ID : 264330103173  
Status : Answered  
Chosen Option : 2

**Q.11** Study the given pattern carefully and select the number that can replace the question mark (?) in it.  
(7, 5, 10)  
(2, 1, 5)  
(16, 6, ?)  
(NOTE: Operations should be performed on the whole numbers, without breaking down the numbers into its constituent digits. E.g. 13 – Operations on 13 such as adding/subtracting/multiplying etc. to 13 can be performed. Breaking down 13 into 1 and 3 and then performing mathematical operations on 1 and 3 is not allowed)

- Ans  1. 32  
 2. 50  
 3. 45  
 4. 24

Question ID : 26433082461  
Status : Answered  
Chosen Option : 2

**Q.12** If '+' means 'subtraction', '-' means 'multiplication', '÷' means 'addition' and '×' means 'division', then what is the value of the following expression?  
 $3 - 21 + 153 \times 17 \div 26$

- Ans  1. 84  
 2. 80  
 3. 76  
 4. 58

Question ID : 264330133136  
Status : Answered  
Chosen Option : 2

Q.13 Select the figure that will replace the question mark (?) in the following figure series.

↑	□	L	R	↑	△	F	□	↑	R	F	L	
R	○	♥	A	□	L	R	○	△	A	□	↑	
A	F	△	F	○	♥	A	♥	L	♥	○	△	?

Ans

✗ 1.

A	L	F
♥	↑	□
R	△	○

✓ 2.

♥	□	F
R	○	L
A	△	↑

✗ 3.

A	△	○
♥	↑	□
R	L	F

✗ 4.

♥	L	↑
R	F	△
A	□	○

Question ID : 264330143840

Status : Answered

Chosen Option : 2

Q.14 Which number should replace the question mark (?) in the following number series?  
49, 54, 44, 59, ?, 64, 34

Ans ✗ 1. 51

✗ 2. 36

✓ 3. 39

✗ 4. 44

Question ID : 26433090121

Status : Answered

Chosen Option : 3

**Q.15** Select the option that represents the letters that, when sequentially placed from left to right in the blanks below, will complete the letter series.  
DY\_GMI\_ \_YTG\_ILDYT\_MILD\_TGM\_L

- Ans  1. TLDGMIY  
 2. TDLGMYI  
 3. TLDMGYI  
 4. TLDYMIG

Question ID : 264330131031  
Status : Answered  
Chosen Option : 3

**Q.16** Select the option that represents the correct order of the given words as they would appear in an English dictionary.

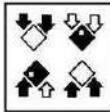
1. Decline
2. Decouple
3. Decrease
4. Decorate
5. Decorum
6. Decode

- Ans  1. 1, 6, 4, 5, 2, 3  
 2. 1, 4, 6, 2, 5, 3  
 3. 1, 6, 4, 2, 5, 3  
 4. 1, 6, 5, 4, 2, 3

Question ID : 264330132157  
Status : Answered  
Chosen Option : 1

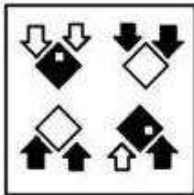
**Q.17** Which of the answer figures is the exact mirror image of the given problem figure when the mirror is held at the right side?

Problem figure:

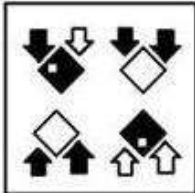


Ans

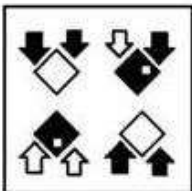
✓ 1.



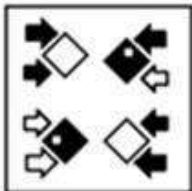
✗ 2.



✗ 3.



✗ 4.



Question ID : 26433069590

Status : Answered

Chosen Option : 1

**Q.18** Four letter-clusters have been given, out of which three are alike in some manner and one is different. Select the one that is different.

Ans ✗ 1. HLOP

✓ 2. FHJL

✗ 3. AEHI

✗ 4. QUXY

Question ID : 264330143773

Status : Answered

Chosen Option : 2

Q.19 Select the set in which the numbers are related in the same way as are the numbers of the following set.

(NOTE : Operations should be performed on the whole numbers, without breaking down the numbers into its constituent digits. E.g. 13 – Operations on 13 such as adding /subtracting /multiplying etc. to 13 can be performed. Breaking down 13 into 1 and 3 and then performing mathematical operations on 1 and 3 is NOT allowed)  
(8, 388, 18)  
(11, 137, 4)

Ans ☒ 1. (15, 230, 2)

☒ 2. (3, 51, 7)

☒ 3. (10, 118, 9)

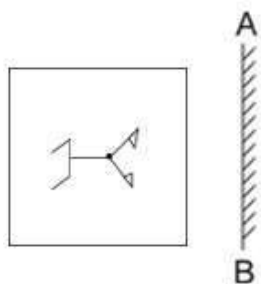
☒ 4. (14, 221, 5)

Question ID : 264330130342

Status : Answered

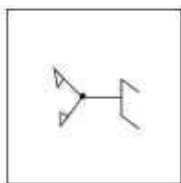
Chosen Option : 4

Q.20 Select the correct mirror image of the given figure when the mirror is placed at AB.

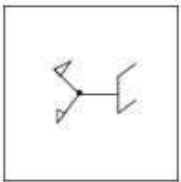


Ans

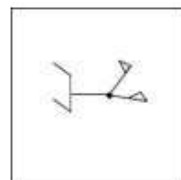
☒ 1.



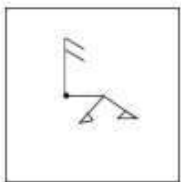
☒ 2.



☒ 3.



☒ 4.



Question ID : 264330106447

Status : Answered

Chosen Option : 1



**Q.21** In a certain code language, 'ROSE' is coded as '228' and TULIP' is coded as '390'. How will 'LOTUS' be coded in that language?

Ans ☒ 1. 435

☒ 2. 425

☒ 3. 430

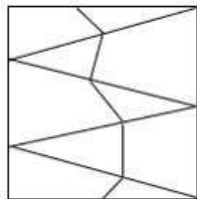
☒ 4. 420

Question ID : 264330129683

Status : Answered

Chosen Option : 1

**Q.22** Select the option figure which is embedded in the given figure (rotation is NOT allowed).



Ans

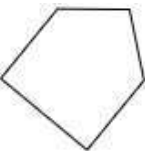
☒ 1.



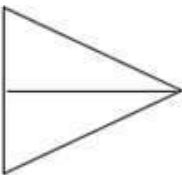
☒ 2.



☒ 3.



☒ 4.



Question ID : 26433097265

Status : Answered

Chosen Option : 2

**Q.23** In a certain code language, 'PLACE' is written as 'CONHA' and 'SHOCK' is written as 'QKQNA'. How will 'FROWN' be written in that language?

- Ans ☒ 1. QUDQU  
☐ 2. RVRST  
☐ 3. RUSRT  
☐ 4. QVQDU

Question ID : 264330131616  
Status : Answered  
Chosen Option : 1

**Q.24** Select the set in which the numbers are related in the same way as are the numbers of the following sets.

(NOTE: Operations should be performed on the whole numbers, without breaking down the numbers into its constituent digits. For e.g. 13 – Operations on 13 such as adding/subtracting/multiplying etc. to 13 can be performed. Breaking down 13 into 1 and 3 and then performing mathematical operations on 1 and 3 is not allowed.)

(24, 3, 10)  
(144, 9, 18)

- Ans ☐ 1. (54, 9, 4)  
☐ 2. (156, 8, 19)  
☐ 3. (72, 8, 9)  
☒ 4. (133, 7, 21)

Question ID : 264330131291  
Status : Answered  
Chosen Option : 4

**Q.25** Select the option that is related to the fifth letter-cluster in the same way as the second letter-cluster is related to the first letter-cluster and the fourth letter-cluster is related to the third letter-cluster.

FUELED : DXBOAG :: GELATO : EHIDPR :: HEARTY : ?

- Ans ☐ 1. OPBSUJ  
☐ 2. MQADFH  
☒ 3. FHXUPB  
☐ 4. LNFxca

Question ID : 26433069032  
Status : Answered  
Chosen Option : 3

Section : General Awareness

**Q.1** Narthaki Nataraj, Padma Shri awardee in 2019, was conferred this award for which of the following contributions?

- Ans ☐ 1. Popularizing Indian cuisine in the world  
☐ 2. Specialising in Indian knowledge system, Nyayshastra  
☐ 3. Bringing the women empowerment through agriculture  
☒ 4. Overcoming social exclusion through Bharatanatyam dance performances

Question ID : 26433055414  
Status : Answered  
Chosen Option : 4

**Q.2** Muhammad bin Tughlaq introduced a copper coin called \_\_\_\_\_ in place of the silver coin.

- Ans
- ☒ 1. Rupak
  - ☒ 2. Rupee
  - ☒ 3. Jittal
  - ☒ 4. Tanka

Question ID : 264330114832  
Status : Answered  
Chosen Option : 3

**Q.3** The approximate amount of silica present in cement is:

- Ans
- ☒ 1. between 27% and 35%
  - ☒ 2. between 37% and 45%
  - ☒ 3. between 17% and 25%
  - ☒ 4. between 47% and 55%

Question ID : 264330131675  
Status : Not Answered  
Chosen Option : --

**Q.4** According to Article \_\_\_\_\_ of the Constitution of India, it shall be the duty of every citizen of India to develop the scientific temper, humanism and the spirit of inquiry and reform.

- Ans
- ☒ 1. 52A
  - ☒ 2. 50A
  - ☒ 3. 49A
  - ☒ 4. 51A

Question ID : 264330110780  
Status : Not Answered  
Chosen Option : --

**Q.5** According to Koeppen's Scheme, which type of climate is denoted by 'Cwg' in India?

- Ans
- ☒ 1. Monsoon with dry winter
  - ☒ 2. Semi-arid steppe climate
  - ☒ 3. Polar type
  - ☒ 4. Monsoon with dry summer

Question ID : 264330116462  
Status : Not Answered  
Chosen Option : --

**Q.6** The Hemis Festival has an influence of which religion?

- Ans ☒ 1. Jainism  
☒ 2. Islam  
☒ 3. Buddhism  
☒ 4. Hinduism

Question ID : 264330111152  
Status : Answered  
Chosen Option : 3

**Q.7** In cells, proteins are synthesised in \_\_\_\_.

- Ans ☒ 1. Mitochondria  
☒ 2. Golgi apparatus  
☒ 3. Nucleus  
☒ 4. Ribosome

Question ID : 26433066700  
Status : Answered  
Chosen Option : 1

**Q.8** The Telugu movie RRR created history by winning a Golden Globe for the Natu Natu song composed by whom among the following personalities?

- Ans ☒ 1. Shankar–Ehsaan–Loy  
☒ 2. Mervin Solomon  
☒ 3. MM Keeravani  
☒ 4. AR Rahman

Question ID : 264330130891  
Status : Answered  
Chosen Option : 3

**Q.9** In July 2021, the Government of India launched a National Initiative for Proficiency in Reading with Understanding and Numeracy (NIPUN Bharat) for ensuring that every child in the country necessarily attains foundational literacy and numeracy by the end of Grade \_\_\_\_.

- Ans ☒ 1. 3  
☒ 2. 4  
☒ 3. 2  
☒ 4. 5

Question ID : 26433061796  
Status : Not Answered  
Chosen Option : --

Q.10 'Alarippu' is a dance piece from which of the following classical dances of India?

Ans ☒ 1. Bharatanatyam

☒ 2. Kathakali

☒ 3. Odissi

☒ 4. Kathak

Question ID : 26433094865

Status : Not Answered

Chosen Option : --

Q.11 What is Typhlops?

Ans ☒ 1. Blind snake

☒ 2. Sea snake

☒ 3. Glass snakes

☒ 4. Grass snake

Question ID : 26433064424

Status : Not Answered

Chosen Option : --

Q.12 Which of the following periods is referred to as a period of stagnant or stationary phase of growth of India's population?

Ans ☒ 1. 1921 - 1941

☒ 2. 1901 - 1921

☒ 3. 1961 - 1981

☒ 4. 1941 - 1961

Question ID : 264330109874

Status : Not Answered

Chosen Option : --

Q.13 In which Five-Year Plan was the process of economic reforms introduced in India?

Ans ☒ 1. Tenth

☒ 2. Fifth

☒ 3. Eighth

☒ 4. Sixth

Question ID : 264330109384

Status : Not Answered

Chosen Option : --

Q.14 How many points are there in the 4th set in volleyball?

Ans ☒ 1. 15

☒ 2. 16

☒ 3. 25

☒ 4. 8

Question ID : 264330110381

Status : Not Answered

Chosen Option : --

**Q.15 Who among the following leaders led the Bardoli Satyagraha?**

- Ans ☒ 1. Lala Lajpat Rai  
☒ 2. Motilal Nehru  
☒ 3. C Rajagopalachari  
☒ 4. Vallabhbhai Patel

Question ID : 264330111408  
Status : Answered  
Chosen Option : 4

**Q.16 Which of the following is an institutional source of credit in India?**

- Ans ☒ 1. Money lenders  
☒ 2. Commission agents  
☒ 3. Traders  
☒ 4. Commercial banks

Question ID : 26433097095  
Status : Answered  
Chosen Option : 4

**Q.17 In India The State election Commissioner is appointed by the \_\_\_\_\_ .**

- Ans ☒ 1. Chief Justice  
☒ 2. President  
☒ 3. Governor  
☒ 4. Chief Minister

Question ID : 264330112787  
Status : Answered  
Chosen Option : 3

**Q.18 Which scientist revised the nebular hypothesis in 1796?**

- Ans ☒ 1. Neville Chamberlain  
☒ 2. Edwin Hubble  
☒ 3. Pierre Laplace  
☒ 4. Harold Jeffrey

Question ID : 26433097110  
Status : Not Answered  
Chosen Option : --

**Q.19 Who among the following has been named as the World Bank Education Advisor for the period of June 2021 to June 2024?**

- Ans ☒ 1. Keisha Thorpe  
☒ 2. Peter Tabichi  
☒ 3. Vishwavir Ahuja  
☒ 4. Ranjitsinh Disale

Question ID : 26433081866  
Status : Answered  
Chosen Option : 4

**Q.20 Which region has the maximum concentration of iron and steel industries in India?**

- Ans ☒ 1. Deccan Plateau  
☒ 2. Malwa Plateau  
☒ 3. Chota Nagpur plateau  
☒ 4. Chhattisgarh Plateau

Question ID : 264330110642  
Status : Not Answered  
Chosen Option : --

**Q.21 The Indian Railways on October 7, 2021, launched and operated two long-haul freight trains named \_\_\_\_\_, to provide a very effective solution to the problem of capacity constraints in critical rail sections.**

- Ans ☒ 1. Himalaya and Thar  
☒ 2. Aakash and Vijay  
☒ 3. Sagar and Prithvi  
☒ 4. Trishul and Garuda

Question ID : 26433082797  
Status : Not Answered  
Chosen Option : --

**Q.22 Maximum how many overs can a bowler bowl in ODI cricket matches?**

- Ans ☒ 1. 11  
☒ 2. 9  
☒ 3. 10  
☒ 4. 8

Question ID : 264330109724  
Status : Not Answered  
Chosen Option : --

**Q.23 Who among the following Mauryan kings gave up war after the battle of Kalinga?**

- Ans ☒ 1. Chandragupta Maurya  
☒ 2. Ashoka  
☒ 3. Mahinda  
☒ 4. Bindusara

Question ID : 264330113558  
Status : Answered  
Chosen Option : 2

**Q.24** Who among the following was the founder of the Aligarh Movement, which was largely responsible for the revival of Muslims in India?

- Ans
- ☒ 1. Mirza Ghulam Ahmad
  - ☒ 2. Muhammad Iqbal
  - ☒ 3. Abdul Gaffar Khan
  - ☒ 4. Sayyid Ahmad Khan

Question ID : 264330141525  
Status : Not Answered  
Chosen Option : --

**Q.25** Which of the following are metalloids?

- Ans
- ☒ 1. Boron, oxygen, aluminium
  - ☒ 2. Boron, mercury, iron
  - ☒ 3. Boron, silicon, antimony
  - ☒ 4. Aluminium, mercury, copper

Question ID : 264330109905  
Status : Answered  
Chosen Option : 3

Section : Quantitative Aptitude

**Q.1** If the areas of two similar triangles are in the ratio 196 : 625, what would be the ratio of the corresponding sides?

- Ans
- ☒ 1. 14:25
  - ☒ 2. 13:20
  - ☒ 3. 14:20
  - ☒ 4. 13:25

Question ID : 264330143598  
Status : Answered  
Chosen Option : 1

**Q.2** If  $\sec\theta + \tan\theta = 5$ , then find the value of  $\tan\theta$ .

- Ans
- ☒ 1.  $\frac{5}{12}$
  - ☒ 2.  $\frac{13}{5}$
  - ☒ 3.  $\frac{13}{3}$
  - ☒ 4.  $\frac{12}{5}$

Question ID : 264330143574  
Status : Answered  
Chosen Option : 4



Q.3 The ratio of the length of each equal side and the third side of an isosceles triangle is 3 : 5. If the area of the triangle is  $30\sqrt{11}$  cm<sup>2</sup>, then the length of the third side (in cm) is:

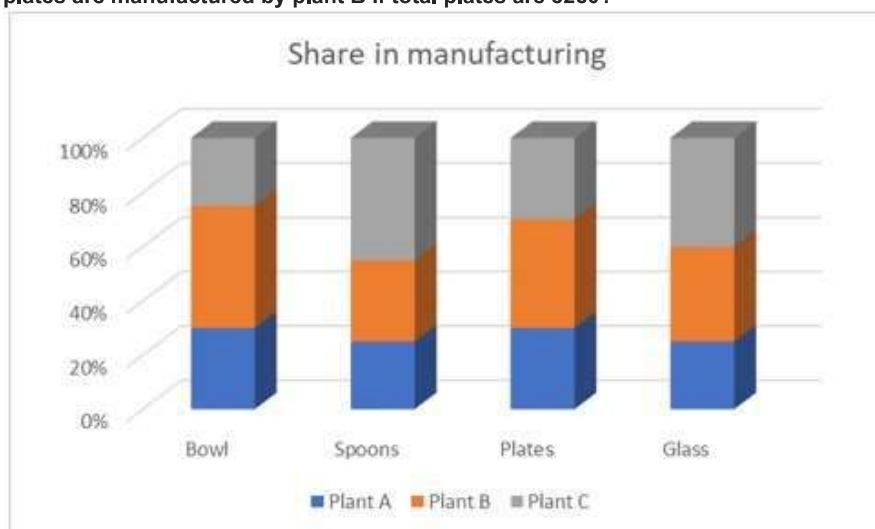
- Ans
- ✓ 1.  $10\sqrt{6}$
  - ✗ 2.  $5\sqrt{6}$
  - ✗ 3.  $13\sqrt{6}$
  - ✗ 4.  $11\sqrt{6}$

Question ID : 26433083002

Status : Answered

Chosen Option : 1

Q.4 In a factory, utensils are manufactured in three plants, plant A, B and C. How many plates are manufactured by plant B if total plates are 3260?



- Ans
- ✗ 1. 1467
  - ✓ 2. 1304
  - ✗ 3. 1254
  - ✗ 4. 1141

Question ID : 264330130031

Status : Answered

Chosen Option : 2

Q.5 The value of  $\left(\frac{1}{\sin \theta} + \frac{1}{\tan \theta}\right)\left(\frac{1}{\sin \theta} - \frac{1}{\tan \theta}\right)$  is:

- Ans
- ✗ 1. 0
  - ✗ 2. 2
  - ✗ 3. 3
  - ✓ 4. 1

Question ID : 264330126538

Status : Answered

Chosen Option : 4

**Q.6** The percentage profit earned by selling an article for ₹2,000 is the same as the percentage loss incurred by selling the same article for ₹1,200. At what price should that article be sold to make a profit of 20%?

- Ans
- ☒ 1. ₹2,000
  - ☒ 2. ₹1,800
  - ☒ 3. ₹1,920
  - ☒ 4. ₹1,840

Question ID : 26433091539  
Status : Answered  
Chosen Option : 3

**Q.7** Which number among 24963, 24973, 24983 and 24993 is divisible by 7?

- Ans
- ☒ 1. 24973
  - ☒ 2. 24983
  - ☒ 3. 24963
  - ☒ 4. 24993

Question ID : 264330131434  
Status : Answered  
Chosen Option : 2

**Q.8** Simplify the following:  
 $\sin 2x + 2 \sin 4x + \sin 6x$

- Ans
- ☒ 1.  $4 \cos^2 x \sin 4x$
  - ☒ 2.  $4 \cos^2 x \sin x$
  - ☒ 3.  $2 \cos^2 x \sin 4x$
  - ☒ 4.  $4 \sin^2 x \sin 4x$

Question ID : 26433076060  
Status : Not Answered  
Chosen Option : --

**Q.9** If  $405 : y :: y : 125$ , and  $y > 0$ , then find the value of  $y$ .

- Ans
- ☒ 1. 225
  - ☒ 2. 205
  - ☒ 3. 215
  - ☒ 4. 235

Question ID : 264330131169  
Status : Answered  
Chosen Option : 1

**Q.10** A policeman follows a thief who is 600 m ahead of the policeman. If the policeman and the thief run at speeds of 10 km/h and 8 km/h, respectively, in how much time (in minutes), will the policeman catch the thief?

- Ans
- ☒ 1. 16
  - ☒ 2. 14
  - ☒ 3. 18
  - ☒ 4. 12

Question ID : 264330129448  
Status : Answered  
Chosen Option : 3

**Q.11** Which of the following numbers is divisible by 36?

- Ans
- ☒ 1. 47502
  - ☒ 2. 29412
  - ☒ 3. 54732
  - ☒ 4. 87064

Question ID : 264330131115  
Status : Answered  
Chosen Option : 2

**Q.12** Amar can complete a work in 15 days, and Prem, in 12 days. Starting with Amar, they work on alternate days. In how many days will the work be completed?

- Ans
- ☒ 1.  $13\frac{2}{5}$
  - ☒ 2.  $12\frac{1}{6}$
  - ☒ 3.  $13\frac{1}{2}$
  - ☒ 4. 13

Question ID : 264330118104  
Status : Answered  
Chosen Option : 1

Q.13 A and B alone can do a piece of work in 4 and 9 days, respectively. In how many days will the work be completed, if they both work on alternate days, starting with B?

Ans

☐ 1.  $5\frac{1}{3}$

☒ 2.  $5\frac{2}{3}$

☐ 3. 5

☐ 4.  $5\frac{1}{4}$

Question ID : 264330119534

Status : Answered

Chosen Option : 2

Q.14 If two qualities of pulses 'X' and 'Y' of prices ₹100 and ₹150 per kg are mixed in the ratio 7 : 20, then what is the price (in ₹) of this mixture of pulses (correct to the nearest Rupee)?

Ans ☒ 1. 137

☐ 2. 135

☐ 3. 134

☐ 4. 136

Question ID : 264330131442

Status : Answered

Chosen Option : 1

Q.15 If  $x - \frac{1}{x} = -6$ , what will be the value of  $x^5 - \frac{1}{x^5}$ ?

Ans ☐ 1. - 8898

☐ 2. - 8896

☒ 3. - 8886

☐ 4. - 8892

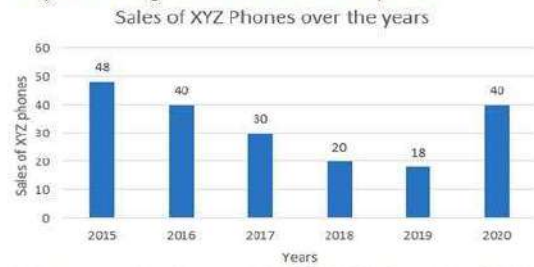
Question ID : 264330114555

Status : Not Answered

Chosen Option : --

Q.16

Study the following bar chart and answer the question.



Find the percentage increase of sales of XYZ phones from 2019 to 2020? (Rounded up to 2 decimal places)

- Ans
- ✓ 1. 122.22 Percent
  - ✗ 2. 110.11 Percent
  - ✗ 3. 119.19 Percent
  - ✗ 4. 121.89 Percent

Question ID : 264330122722

Status : Answered

Chosen Option : 1

Q.17 In a factory, 48% of the number of male workers is equal to two-third of the number of female workers. What is the ratio of the number of males to that of the females in the factory?

- Ans
- ✗ 1. 25 : 12
  - ✗ 2. 12 : 25
  - ✗ 3. 18 : 25
  - ✓ 4. 25 : 18

Question ID : 264330102338

Status : Answered

Chosen Option : 4

Q.18 If  $(a + b + c) = 19$ , and  $(a^2 + b^2 + c^2) = 155$ , find the value of  $(a - b)^2 + (b - c)^2 + (c - a)^2$ .

- Ans
- ✓ 1. 104
  - ✗ 2. 108
  - ✗ 3. 100
  - ✗ 4. 98

Question ID : 264330114549

Status : Answered

Chosen Option : 1

Q.19 The difference (in ₹) between a discount of 35% on ₹3,600 and two successive discounts of 30% and 5% on the same amount is:

Ans ☒ 1. 54

☐ 2. 78

☐ 3. 82

☐ 4. 52

Question ID : 264330103484

Status : Answered

Chosen Option : 1

Q.20 Raja and Rocky together can complete painting work in 5 days. Together they both start painting, but after 2 days, Rocky falls sick and leaves the work. If Raja completes the remaining painting in 4 days, find the number of days in which Rocky alone can do the work.

Ans ☐ 1. 12 days

☐ 2. 15 days

☒ 3. 20 days

☐ 4. 10 days

Question ID : 264330143460

Status : Answered

Chosen Option : 3

Q.21 If  $\sin A = -\frac{3}{5}$ ,  $A$  lies in III quadrant, the value of  $\sec A$  is:

Ans ☐ 1.  $-\frac{4}{5}$

☒ 2.  $-\frac{5}{4}$

☐ 3.  $-\frac{3}{4}$

☐ 4.  $\frac{3}{4}$

Question ID : 26433058170

Status : Answered

Chosen Option : 2

Q.22 A and B can do a piece of work in 5 days and 10 days, respectively. They began the work together but A left after some days and B finished the remaining work in 8 days. After how many days did A leave?

Ans

☐ 1.  $3\frac{1}{8}$

☐ 2.  $5\frac{1}{8}$

☐ 3.  $6\frac{1}{8}$

☒ 4.  $\frac{2}{3}$

Question ID : 264330119205

Status : Answered

Chosen Option : 4

Q.23 To go a distance of 144 km upstream, a rower takes 12 hours while it takes her only 9 hours to row the same distance downstream. What is the speed of the stream?

Ans

☐ 1. 3 km/h

☐ 2. 1 km/h

☐ 3. 1.5 km/h

☒ 4. 2 km/h

Question ID : 264330143454

Status : Answered

Chosen Option : 4

Q.24 The perimeter of an equilateral triangle is 48 cm. Find its area (in  $\text{cm}^2$ ).

Ans

☐ 1.  $81\sqrt{3}$

☐ 2.  $8\sqrt{3}$

☐ 3.  $25\sqrt{3}$

☒ 4.  $64\sqrt{3}$

Question ID : 264330102380

Status : Answered

Chosen Option : 4

Q.25 The cost of 32 pens and 12 pencils is ₹790. What is the total cost (in ₹) of 8 pens and 3 pencils together?

Ans

☐ 1. 200.5

☒ 2. 197.5

☐ 3. 180.5

☐ 4. 220.5

Question ID : 264330145547

Status : Answered

Chosen Option : 2

**Q.1** Identify the word in the given sentence that is the **ANTONYM** of the word 'frugal'.  
At present, people are paying extravagant prices for houses because they have to have accommodation.

- Ans
- ☒ 1. prices
  - ☒ 2. accommodation
  - ☒ 3. present
  - ☒ 4. extravagant

Question ID : 26433086507  
Status : Answered  
Chosen Option : 4

**Q.2** Select the **INCORRECTLY** spelt word.

- Ans
- ☒ 1. Horticulture
  - ☒ 2. Ignision
  - ☒ 3. Copulate
  - ☒ 4. Portion

Question ID : 264330120773  
Status : Answered  
Chosen Option : 2

**Q.3** Select the most appropriate option that can substitute the underlined segment in the given sentence.

I will not go out if is raining.

- Ans
- ☒ 1. raining
  - ☒ 2. it rains
  - ☒ 3. will rain
  - ☒ 4. rained

Question ID : 26433088831  
Status : Answered  
Chosen Option : 2

**Q.4** Select the most appropriate option that can substitute the underlined segment in the given sentence. If there is no need to substitute it, select 'No substitution'.

Please ask the dog to get of my couch.

- Ans
- ☒ 1. get of mine
  - ☒ 2. get off my
  - ☒ 3. get off mine
  - ☒ 4. No substitution

Question ID : 26433084578  
Status : Answered  
Chosen Option : 2



**Q.5** The following sentence has been split into four segments. Identify the segment that contains a grammatical error.

I fell / asleep while / I read / the book.

- Ans ☒ 1. the book  
☒ 2. I read  
☒ 3. asleep while  
☒ 4. I fell

Question ID : 264330108875  
Status : Answered  
Chosen Option : 2

**Q.6** Select the most appropriate ANTONYM of the underlined word.

Those streets are very lonely.

- Ans ☒ 1. Crowded  
☒ 2. Isolated  
☒ 3. Empty  
☒ 4. Remote

Question ID : 26433090863  
Status : Answered  
Chosen Option : 1

**Q.7** Select the INCORRECTLY spelt word.

- Ans ☒ 1. Concieve  
☒ 2. Detect  
☒ 3. Predict  
☒ 4. Stimulate

Question ID : 26433089352  
Status : Answered  
Chosen Option : 1

**Q.8** Select the most appropriate option that can substitute the underlined segment in the given sentence.

The mob drove on the rampage and looted several shops in the locality.

- Ans ☒ 1. played on the rampage  
☒ 2. went on the rampage  
☒ 3. ran on the rampage  
☒ 4. strolled on the rampage

Question ID : 26433098997  
Status : Answered  
Chosen Option : 2

**Q.9** Select the option that can be used as a one-word substitute for the given group of words.

A secret plan, made to do something (usually wrong)

- Ans ☒ 1. Strategy  
☒ 2. Planning  
☒ 3. Conditioning  
☒ 4. Conspiracy

Question ID : 26433088124

Status : Answered

Chosen Option : 4

**Q.10** Sentences of a paragraph are given below in jumbled order. Arrange the sentences in the correct order to form a meaningful and coherent paragraph.

- A.After a few months, the two countries engaged in the Kargil war.  
B.Furthermore, a number of violent wars were fought between India and Pakistan.  
C.In February 1999, during the winter invasion, India and Pakistan signed the Lahore Declaration, which was predicated on peace.  
D.The engagements were extremely challenging for the Indian army since they had to fight on rough rocky terrain.

- Ans ☒ 1. DCAB  
☒ 2. CABD  
☒ 3. CDBA  
☒ 4. DABC

Question ID : 26433096987

Status : Answered

Chosen Option : 2

**Q.11** Select the most appropriate meaning of the given idiom.

By the skin of your teeth

- Ans ☒ 1. Confident of victory  
☒ 2. Kind towards the weak  
☒ 3. Determined to strike  
☒ 4. Just barely

Question ID : 26433088774

Status : Answered

Chosen Option : 4

**Q.12** The following sentence has been divided into parts. One of them may contain an error. Select the part that contains the error from the given options. If you don't find any error, mark 'No error' as your answer.

I can't talk right now. / I am being really busy. / I'll call you later.

- Ans
- ☒ 1. I can't talk right now
  - ☒ 2. I am being really busy
  - ☒ 3. No error
  - ☒ 4. I'll call you later

Question ID : 26433088102  
Status : Answered  
Chosen Option : 2

**Q.13** Select the option that can be used as a one-word substitute for the given group of words.

To put off doing something, especially out of habitual carelessness or laziness

- Ans
- ☒ 1. Accelerate
  - ☒ 2. Lacerate
  - ☒ 3. Procrastinate
  - ☒ 4. Recuperate

Question ID : 26433073677  
Status : Answered  
Chosen Option : 3

**Q.14** Select the most appropriate ANTONYM of the underlined word. Seldom had he been so joyous in other's happiness.

- Ans
- ☒ 1. Hardly
  - ☒ 2. Rarely
  - ☒ 3. Frequently
  - ☒ 4. Occasionally

Question ID : 264330121876  
Status : Answered  
Chosen Option : 3

**Q.15** Describe how you will tell your friends that Rohit helps Reghu in passive voice.

- Ans
- ☒ 1. Reghu will been helped by Rohit.
  - ☒ 2. Reghu is helped by Rohit.
  - ☒ 3. Rohit help Reghu.
  - ☒ 4. Reghu is being help by Rohit.

Question ID : 264330122773  
Status : Answered  
Chosen Option : 2

**Q.16** Select the most appropriate option to fill in the blank.  
They are playing songs so \_\_\_\_\_ that the entire neighbourhood is disturbed.

- Ans
- ☒ 1. lord
  - ☒ 2. loved
  - ☒ 3. laud
  - ☒ 4. loud

Question ID : 264330139495  
Status : Answered  
Chosen Option : 4

**Q.17** Select the option that expresses the given sentence in active voice  
The cards were being distributed by her to her friends.

- Ans
- ☒ 1. She was distributing the cards to her friends.
  - ☒ 2. Her friends were distributing the cards for her.
  - ☒ 3. The cards were been distributed to her friends.
  - ☒ 4. Her cards were distributed by her friends.

Question ID : 264330141139  
Status : Answered  
Chosen Option : 1

**Q.18** Select the most appropriate ANTONYM of the underlined word.

He brought disgrace to his family by being involved in illegal activities.

- Ans
- ☒ 1. Suspicion
  - ☒ 2. Shame
  - ☒ 3. Discord
  - ☒ 4. Honour

Question ID : 26433073440  
Status : Answered  
Chosen Option : 4

**Q.19** Select the most appropriate ANTONYM of the given word.  
Divergence

- Ans
- ☒ 1. Convergence
  - ☒ 2. Existence
  - ☒ 3. Resilience
  - ☒ 4. Transience

Question ID : 264330132806  
Status : Answered  
Chosen Option : 1

**Q.20** Select the option that can be used as a one-word substitute for the given group of words.

A person who gives help and sympathy to people who need it.

- Ans ☒ 1. Preacher  
☒ 2. Moralist  
☒ 3. Samaritan  
☒ 4. Pardoner

Question ID : 26433087905

Status : Answered

Chosen Option : 3

**Comprehension:**

In the following passage, some words have been deleted. Read the passage carefully and select the most appropriate option to fill in each blank.

The Maasais live in (1)\_\_\_\_\_ very beautiful part of Africa. They live on the wide plains in southern and northern Kenya and northern Tanzania. The area (2)\_\_\_\_\_ of miles of rolling grass land, on which you can find thorny bushes and rocky hills. The people move from one place to another according to the seasons, looking for grasses and other plants (3)\_\_\_\_\_ which their cattle can graze. They have no permanent home. When they want to settle in a place for some time, they build a kind of camp called a 'Manyatta', where a few families live for a (4)\_\_\_\_\_ weeks or months. Then they move on again, taking their few (5)\_\_\_\_\_ with them, and burning the old 'Manyatta' to the ground.

**SubQuestion No : 21**

**Q.21** Select the most appropriate option to fill in blank number 1.

- Ans ☒ 1. a  
☒ 2. that  
☒ 3. their  
☒ 4. some

Question ID : 264330145518

Status : Answered

Chosen Option : 4

**Comprehension:**

In the following passage, some words have been deleted. Read the passage carefully and select the most appropriate option to fill in each blank.

The Maasais live in (1)\_\_\_\_\_ very beautiful part of Africa. They live on the wide plains in southern and northern Kenya and northern Tanzania. The area (2)\_\_\_\_\_ of miles of rolling grass land, on which you can find thorny bushes and rocky hills. The people move from one place to another according to the seasons, looking for grasses and other plants (3)\_\_\_\_\_ which their cattle can graze. They have no permanent home. When they want to settle in a place for some time, they build a kind of camp called a 'Manyatta', where a few families live for a (4)\_\_\_\_\_ weeks or months. Then they move on again, taking their few (5)\_\_\_\_\_ with them, and burning the old 'Manyatta' to the ground.

**SubQuestion No : 22**

**Q.22** Select the most appropriate option to fill in blank number 2.

- Ans ☒ 1. surrounds  
☒ 2. measures  
☒ 3. considers  
☒ 4. consists

Question ID : 264330145519

Status : Answered

Chosen Option : 1

**Comprehension:**

In the following passage, some words have been deleted. Read the passage carefully and select the most appropriate option to fill in each blank.

The Maasais live in (1)\_\_\_\_\_ very beautiful part of Africa. They live on the wide plains in southern and northern Kenya and northern Tanzania. The area (2)\_\_\_\_\_ of miles of rolling grass land, on which you can find thorny bushes and rocky hills. The people move from one place to another according to the seasons, looking for grasses and other plants (3)\_\_\_\_\_ which their cattle can graze. They have no permanent home. When they want to settle in a place for some time, they build a kind of camp called a 'Manyatta', where a few families live for a (4)\_\_\_\_\_ weeks or months. Then they move on again, taking their few (5)\_\_\_\_\_ with them, and burning the old 'Manyatta' to the ground.

**SubQuestion No : 23****Q.23 Select the most appropriate option to fill in blank number 3.****Ans**  1. on 2. by 3. with 4. at

Question ID : 264330145520

Status : Answered

Chosen Option : 1

**Comprehension:**

In the following passage, some words have been deleted. Read the passage carefully and select the most appropriate option to fill in each blank.

The Maasais live in (1)\_\_\_\_\_ very beautiful part of Africa. They live on the wide plains in southern and northern Kenya and northern Tanzania. The area (2)\_\_\_\_\_ of miles of rolling grass land, on which you can find thorny bushes and rocky hills. The people move from one place to another according to the seasons, looking for grasses and other plants (3)\_\_\_\_\_ which their cattle can graze. They have no permanent home. When they want to settle in a place for some time, they build a kind of camp called a 'Manyatta', where a few families live for a (4)\_\_\_\_\_ weeks or months. Then they move on again, taking their few (5)\_\_\_\_\_ with them, and burning the old 'Manyatta' to the ground.

**SubQuestion No : 24****Q.24 Select the most appropriate option to fill in blank number 4.****Ans**  1. little 2. significant 3. least 4. few

Question ID : 264330145521

Status : Answered

Chosen Option : 4





**Comprehension:**

In the following passage, some words have been deleted. Read the passage carefully and select the most appropriate option to fill in each blank.

The Maasais live in (1)\_\_\_\_\_ very beautiful part of Africa. They live on the wide plains in southern and northern Kenya and northern Tanzania. The area (2)\_\_\_\_\_ of miles of rolling grass land, on which you can find thorny bushes and rocky hills. The people move from one place to another according to the seasons, looking for grasses and other plants (3)\_\_\_\_\_ which their cattle can graze. They have no permanent home. When they want to settle in a place for some time, they build a kind of camp called a 'Manyatta', where a few families live for a (4)\_\_\_\_\_ weeks or months. Then they move on again, taking their few (5)\_\_\_\_\_ with them, and burning the old 'Manyatta' to the ground.

**SubQuestion No : 25**

**Q.25** Select the most appropriate option to fill in blank number 5.

- Ans  1. inhibitions
-  2. experiences
-  3. antiques
-  4. belongings

Question ID : 264330145522

Status : Answered

Chosen Option : 4

## Combined Graduate level Examination 2023 Tier I

Roll Number	
Candidate Name	
Venue Name	Shankara Group Of Institutions
Exam Date	18/07/2023
Exam Time	2:30 PM - 3:30 PM
Subject	Combined Graduate Level Examination Tier I 2023

### Section : General Intelligence and Reasoning

**Q.1** Select the option that is related to the fifth number in the same way as the second number is related to the first number and the fourth number is related to the third number.

17 : 189 :: 13 : 69 :: 18 : ?

Ans ☒ 1. 224

☐ 2. 241

☐ 3. 214

☐ 4. 242

Question ID : 264330143712

Status : Answered

Chosen Option : 1

**Q.2** Three statements are given followed by three conclusions numbered I, II and III. Assuming the statements to be true, even if they seem to be at variance with commonly known facts, decide which of the conclusions logically follow(s) from the statements.

**Statements:**

All males are boys.

Some teachers are boys.

All students are teachers.

**Conclusions:**

I. Some boys are males.

II. Some teachers are students.

III. All males are students.

Ans ☐ 1. All conclusions follow

☐ 2. Only conclusions II and III follow

☒ 3. Only conclusions I and II follow

☐ 4. Only conclusions I and III follow

Question ID : 264330143721


Status : Answered

Chosen Option : 3



**Q.3** Select the set in which the numbers are related in the same way as are the numbers of the given sets.

(NOTE : Operations should be performed on the whole numbers, without breaking down the numbers into its constituent digits. E.g. 13 – Operations on 13 such as adding /Subtracting /multiplying etc. to 13 can be performed. Breaking down 13 into 1 and 3 and then performing mathematical operations on 1 and 3 is NOT allowed)  
(12, 40, 14)  
(15, 33, 9)

Ans  1. (11, 105, 42)

 2. (21, 35, 41)

 3. (21, 95, 35)

 4. (21, 91, 35)

Question ID : 264330130208

Status : Answered

Chosen Option : 4

**Q.4** Select the option that represents the letters that, when placed from left to right in the following blanks, will complete the letter-series.

M N B \_ C M \_ \_ W C M N B \_ \_ M \_ \_ Y C

Ans  1. V N B X C N B

 2. V N B Y D N B

 3. W Y Y Y C N B

 4. W N B Y D N B

Question ID : 264330143744

Status : Answered

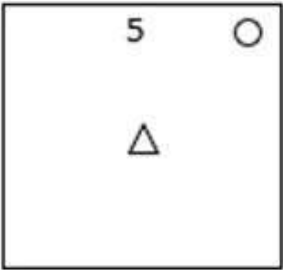
Chosen Option : 4

Q.5 Select the figure from the options that can replace the question mark (?) and complete the given pattern.

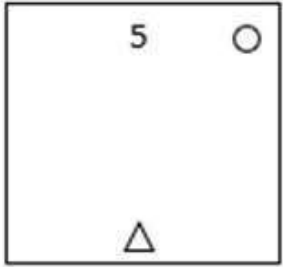
5  △  ○	2  ○  △	○ △ 5	2 ○  △	?
---------------------	---------------------	-------	--------------	---

Ans

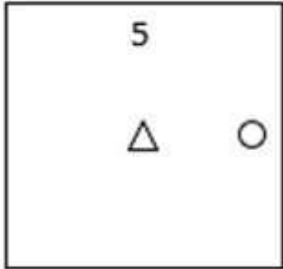
✗ 1.



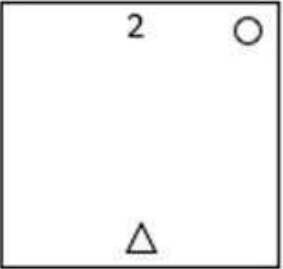
✓ 2.



✗ 3.




✗ 4.



Question ID : 26433085786  
Status : Answered  
Chosen Option : 2

**Q.6** Select the option that is related to the fifth letter-cluster in the same way as the second letter-cluster is related to the first letter-cluster and the fourth letter-cluster is related to the third letter-cluster.

**LIGHT : ORTSG :: FANCY : UZMXB :: WATCH : ?**

- Ans  1. DZHXS  
 2. DZGYS  
 3. DZGXS  
 4. DZGXT

Question ID : 26433086974

Status : Answered

Chosen Option : 3

**Q.7** Which two signs should be interchanged to make the given equation correct?

$$1664 \div 4 \times 2 + 712 - 316 = 436$$

- Ans  1. ÷ and +  
 2. ÷ and –  
 3. – and +  
 4. + and ×

Question ID : 264330132499

Status : Not Answered

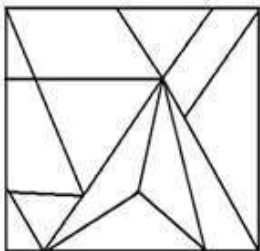
Chosen Option : --

**Q.8** Select the option figure in which the given figure is embedded (rotation is NOT allowed).

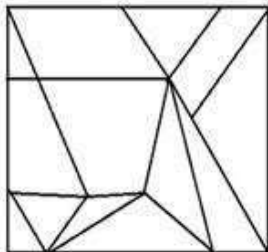


Ans

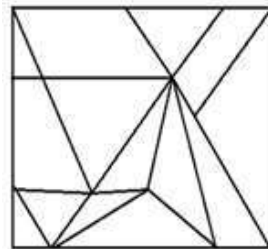
✗ 1.



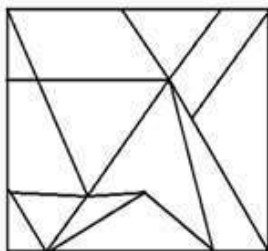
✗ 2.



✓ 3.



✗ 4.



Question ID : 26433067427

Status : Answered

Chosen Option : 3

**Q.9** Select the option that represents the letters that, when sequentially placed from left to right in the blanks below, will complete the letter series.

\_\_ BFGDM \_\_ G \_ MBF \_ D \_ B \_ G

Ans ✗ 1. DMFBDGMF

✓ 2. DMBFDGMF

✗ 3. DFBMDGMF

✗ 4. DMBFGDFM

Question ID : 26433090010

Status : Answered

Chosen Option : 2

Q.10 Select the figure that will replace the question mark (?) in the following figure series.

6	☆	☆	L	□	☆	☆	V	
D	V	L	□	6	S	D	L	V
□		S	D	V	6	S	D	L
								?

Ans

✗ 1.

L		S
D	V	□
6		☆

✓ 2.

6		☆
D	V	L
□		S

✗ 3.

□		☆
D	V	6
L		S

✗ 4.

V		S
D	☆	L
6		□

Question ID : 264330143847

Status : Answered

Chosen Option : 2

Q.11 Select the option that is related to the fifth letter-cluster in the same way as the second letter-cluster is related to the first letter-cluster and the fourth letter-cluster is related to the third letter-cluster.

BPX : ENB :: KUW : NSA :: FOY : ?

Ans ✗ 1. CQU

✗ 2. CQW

✗ 3. IMB

✓ 4. IMC

Question ID : 264330104099

Status : Answered

Chosen Option : 3

**Q.12** The second number in the given number-pairs is obtained by performing certain mathematical operation(s) on the first number. The same operation(s) is/are followed in all the number-pairs, except one. Find that odd number-pair.

- Ans ☒ 1. (24, 195)  
☒ 2. (26, 211)  
☒ 3. (25, 200)  
☒ 4. (36, 291)

Question ID : 264330143691  
Status : Not Answered  
Chosen Option : --

**Q.13** Looking at a picture of a girl Veronica said, "She is the mother of my husband's brother's daughter." How is Veronica related to the girl in the picture?

- Ans ☒ 1. Mother's sister  
☒ 2. Husband's Brother's wife  
☒ 3. Father's Brother's daughter  
☒ 4. Mother

Question ID : 26433092751  
Status : Answered  
Chosen Option : 2

**Q.14** Select the set in which the numbers are related in the same way as are the numbers of the given set.

(NOTE : Operations should be performed on the whole numbers, without breaking down the numbers into its constituent digits. E.g. 13 – Operations on 13 such as adding /subtracting /multiplying etc. to 13 can be performed. Breaking down 13 into 1 and 3 and then performing mathematical operations on 1 and 3 is not allowed.)  
(54, 32, 66)  
(49, 31, 54)

- Ans ☒ 1. (39, 18, 63)  
☒ 2. (44, 28, 52)  
☒ 3. (68, 49, 55)  
☒ 4. (55, 30, 70)

Question ID : 264330134929  
Status : Not Answered  
Chosen Option : --

**Q.15** Select the number from among the given options that can replace the question mark (?) in the following series.  
4, 11, 20, 31, 44, ?

- Ans ☒ 1. 61  
☒ 2. 63  
☒ 3. 57  
☒ 4. 59

Question ID : 264330106285  
Status : Answered  
Chosen Option : 4

**Q.16** Three Statements are given followed by Three conclusions numbered I, II and III.  
Assuming the statements to be true, even if they seem to be at variance with commonly known facts, decide which of the conclusions logically follow(s) from the statements.

Statements:

All curtains are doormats.

Some doormats are pillows.

Some pillows are bedsheets.

Conclusions:

I. Some bedsheets are doormats.

II. Some bedsheets are curtains.

III. Some pillows are doormats.

Ans  1. Only conclusion III follows.

 2. Only conclusion I follows.

 3. Only conclusion II follows.

 4. All conclusions follow.

Question ID : 26433093153

Status : Answered


Chosen Option : 3

**Q.17** If exactly 1 year and 2 days later it is Tuesday, then what day is it today? It is not a leap year.

Ans  1. Sunday

 2. Monday

 3. Saturday

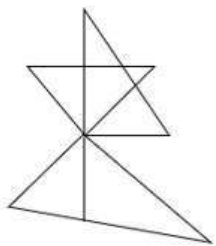
 4. Tuesday

Question ID : 26433057673

Status : Answered

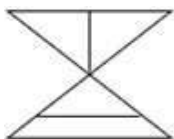
Chosen Option : 3

**Q.18** Select the option figure which is embedded in the given figure (rotation is NOT allowed).

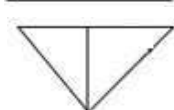


Ans

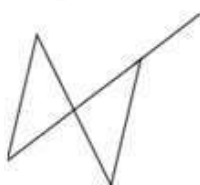
☒ 1.



☒ 2.



☒ 3.



☒ 4.

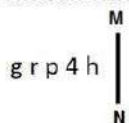


Question ID : 26433097266

Status : Answered

Chosen Option : 2

**Q.19** Select the correct mirror image of the given combination when the mirror is placed at line MN as shown.



Ans

☒ 1. 4 p r g

☒ 2. d 4 q r g

☒ 3. d 4 q r g

☒ 4. d 4 b r g

Question ID : 26433068190

Status : Answered

Chosen Option : 3



**Q.20** In a certain code language, 'PUBLIC' is written as 'TIEIUY' and 'SERVER' is written as 'WEUSEN'. How will 'DIRECT' be written in that language?

Ans  1. HCUBIP

 2. PICBUH

 3. HICBUP

 4. PCUBIH

Question ID : 26433055921

Status : Not Answered

Chosen Option : --

**Q.21** Select the set in which the numbers are related in the same way as are the numbers of the following sets.

(NOTE : Operations should be performed on the whole numbers, without breaking down the numbers into its constituent digits. E.g. 13 – Operations on 13 such as adding /Subtracting/multiplying etc. to 13 can be performed. Breaking down 13 into 1 and 3 and then performing mathematical operations on 1 and 3 is not allowed)  
(36, 6, 18)  
(35, 5, 21)

Ans  1. (49, 7, 21)

 2. (63, 7, 98)

 3. (100, 5, 40)

 4. (76, 13, 5)

Question ID : 26433089576

Status : Not Answered


Chosen Option : --


**Q.22** Select the correct combination of mathematical signs to sequentially replace the \* signs and to balance the given equation.

$$17 * 21 * 7 * 5 * 4 * 34$$

Ans  1. ÷, −, +, ×, =

 2. −, ÷, +, ×, =

 3. +, ×, +, −, =

 4. ×, −, ÷, +, =

Question ID : 26433056940

Status : Answered

Chosen Option : 2

Q.23 Select the option that represents the correct order of the given words as they would appear in an English dictionary.

1. Significant
2. Sinful
3. Signed
4. Singing
5. Simplify

Ans ☒ 1. 3,1,5,2,4

☒ 2. 3,5,1,2,4

☒ 3. 3,2,1,5,4

☒ 4. 3,1,2,5,4


Question ID : 264330130704

Status : Answered

Chosen Option : 1

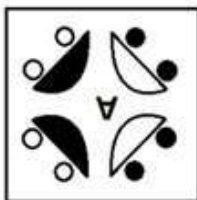
Q.24 Which of the answer figures is the exact mirror image of the given problem figure when the mirror is held at the right side?

Problem figure:



Ans

☒ 1.



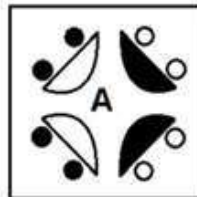
☒ 2.



☒ 3.



☒ 4.



Question ID : 26433067408

Status : Answered

Chosen Option : 4

**Q.25** A family consisting of D, P, W, Y and M is travelling to meet one another. W is travelling with his daughters, D and P. M is travelling with his maternal grandmother, Y. D is the mother of M. How is Y related to P?

- Ans ☒ 1. Daughter  
☒ 2. Mother  
☒ 3. Grandmother  
☒ 4. Sister

Question ID : 264330118671  
Status : Marked For Review  
Chosen Option : 3

Section : General Awareness

**Q.1** The cultivation of \_\_\_\_\_ was introduced on the Baba Budan Hills in India.

- Ans ☒ 1. silk  
☒ 2. tea  
☒ 3. coffee  
☒ 4. cardamom

Question ID : 264330110632  
Status : Not Answered  
Chosen Option : --

**Q.2** Due to attraction of the sun and the moon, what is the frequency of up and falls down of ocean water in a day?

- Ans ☒ 1. Two  
☒ 2. Three  
☒ 3. Four  
☒ 4. One

Question ID : 264330111562  
Status : Answered  
Chosen Option : 1

**Q.3** RG Bhandarkar was a popular leader of which reforming society?

- Ans ☒ 1. Prarthana Samaj  
☒ 2. Arya Samaj  
☒ 3. Theosophical Society  
☒ 4. Brahmo Samaj

Question ID : 264330132690  
Status : Not Answered  
Chosen Option : --

**Q.4** Sports Authority of India, the apex body for sports promotion, was set up in the year \_\_\_\_\_.

- Ans
- ☒ 1. 1990
  - ☒ 2. 1961
  - ☒ 3. 1984
  - ☒ 4. 1982

Question ID : 264330110350  
Status : Not Answered  
Chosen Option : --

**Q.5** \_\_\_\_\_ was the first woman to be ordained as a bhikkhuni in the Buddhism.

- Ans
- ☒ 1. Dhammananda Bhikkhuni
  - ☒ 2. Sujata
  - ☒ 3. Mahapajapati Gotami
  - ☒ 4. Sanghamitta

Question ID : 264330114061  
Status : Not Answered  
Chosen Option : --

**Q.6** A non-SI unit called 'nit' is the unit of which of the following photometric quantities used to measure a multitude of light intensity?

- Ans
- ☒ 1. Luminous exposure
  - ☒ 2. Luminance
  - ☒ 3. Luminosity
  - ☒ 4. Luminous emittance

Question ID : 264330110043  
Status : Not Answered  
Chosen Option : --

**Q.7** On 29 July 2021, the Government of India launched Vidya Pravesh, a preschool preparation programme for \_\_\_\_\_ students, preparing the children for school.

- Ans
- ☒ 1. nursery
  - ☒ 2. pre-nursery
  - ☒ 3. class first
  - ☒ 4. kindergarten

Question ID : 26433061797  
Status : Answered  
Chosen Option : 2

**Q.8** The origin of Directive Principles of State Policy can be traced to which of the following?

- Ans
- ☒ 1. Gandhi Irwin Pact
  - ☒ 2. Poona Pact
  - ☒ 3. Second Round Table Conference
  - ☒ 4. Karachi Resolution

Question ID : 264330110582  
Status : Answered  
Chosen Option : 3

**Q.9** Industries are classified into \_\_\_\_\_ categories in the Industrial Policy Resolution.

- Ans
- ☒ 1. five
  - ☒ 2. four
  - ☒ 3. three
  - ☒ 4. two

Question ID : 264330112529  
Status : Answered  
Chosen Option : 3

**Q.10** 'We have wings' is associated with which of the following sports events?

- Ans
- ☒ 1. Paralympic 2020
  - ☒ 2. Olympic 2016
  - ☒ 3. Olympic 2020
  - ☒ 4. Winter Olympic 2020

Question ID : 264330109675  
Status : Answered  
Chosen Option : 1

**Q.11** Which of the following is NOT a freshwater lake in India?

- Ans
- ☒ 1. Pulicat
  - ☒ 2. Loktak
  - ☒ 3. Bhimtal
  - ☒ 4. Nainital

Question ID : 264330113283  
Status : Answered  
Chosen Option : 4

**Q.12** Single-celled life forms were discovered by Anton Van Leeuwenhoek in \_\_\_\_\_.

- Ans
- ☒ 1. 1774
  - ☒ 2. 1884
  - ☒ 3. 1837
  - ☒ 4. 1674

Question ID : 26433055792  
Status : Not Answered  
Chosen Option : --

Q.13

Match the following neighbouring countries of India with their official languages.

Country	Official Language
1. Sri Lanka	a. Dzongkha
2. Bhutan	b. Burmese
3. Myanmar	c. Sinhala

- Ans ☒ 1. 1-a, 2-c, 3-b  
☒ 2. 1-a, 2-b, 3-c  
☒ 3. 1-c, 2-a, 3-b  
☒ 4. 1-b, 2-a, 3-c

Question ID : 264330132765  
Status : Answered  
Chosen Option : 3

Q.14 Who led the Revolt of 1857 in Bihar?

- Ans ☒ 1. Azimullah  
☒ 2. Bakht Khan  
☒ 3. Veer Kunwar Singh  
☒ 4. Maulvi Ahmadullah

Question ID : 264330109038  
Status : Answered  
Chosen Option : 3

Q.15 Thabal Chongba is a folk dance of which Indian state?

- Ans ☒ 1. Goa  
☒ 2. Mizoram  
☒ 3. Manipur  
☒ 4. West Bengal

Question ID : 264330109593  
Status : Not Answered  
Chosen Option : --

Q.16 Sisodiya Rajput ruler of Mewar, Amar Singh accepted Mughal services during the reign of \_\_\_\_\_.

- Ans ☒ 1. Akbar  
☒ 2. Jahangir  
☒ 3. Aurangzeb  
☒ 4. Babur

Question ID : 264330114092  
Status : Answered  
Chosen Option : 1

**Q.17 Select the INCORRECT statement about Gymnosperms.**

- Ans ☒ 1. Gymnosperms are found as woody shrubs, trees or lianas and include no true aquatics and few epiphytes.
- ☒ 2. Gymnosperms are seedless flowering plants.
- ☒ 3. Gymnosperms are typically slow in terms of reproduction; up to a year may pass between pollination and fertilisation and seed maturation may require 3 years.
- ☒ 4. Gymnosperms exhibit cones or strobili and naked seeds, but not flowers.

Question ID : 264330112814

Status : Not Answered

Chosen Option : --

**Q.18 The total number of Ministers, including the Chief Minister, in the Council of Ministers in a State shall NOT exceed \_\_\_\_\_ of the total number of members of the Legislative Assembly of that State.**

- Ans ☒ 1. twenty percent
- ☒ 2. ten percent
- ☒ 3. fifteen percent
- ☒ 4. twenty five percent

Question ID : 264330134576

Status : Not Attempted and Marked For Review

Chosen Option : --

**Q.19 Identify an application in which solar cells are NOT used.**

- Ans ☒ 1. Radio
- ☒ 2. Space probes
- ☒ 3. Lift system
- ☒ 4. Artificial satellites

Question ID : 26433097104

Status : Answered

Chosen Option : 3

**Q.20 Diwali falls in which of the following months of the Hindu calendar?**

- Ans ☒ 1. Ashadha
- ☒ 2. Bhadrapada
- ☒ 3. Jyeshtha
- ☒ 4. Kartika

Question ID : 26433064320

Status : Not Answered

Chosen Option : --

**Q.21** The biennial tri-services amphibious exercise, AMPHEX 2023 was conducted in \_\_\_\_\_ from 17 to 22 January 2023.

- Ans
- ☒ 1. Bihar
  - ☒ 2. Telangana
  - ☒ 3. Odisha
  - ☒ 4. Andhra Pradesh

Question ID : 264330132590  
Status : Not Answered  
Chosen Option : --

**Q.22** Padmaja Reddy, who was conferred the Padma Shri in 2022, is renowned for which of the following dance forms?

- Ans
- ☒ 1. Kuchipudi
  - ☒ 2. Odissi
  - ☒ 3. Bharatanatyam
  - ☒ 4. Kathak

Question ID : 26433055409  
Status : Not Answered  
Chosen Option : --

**Q.23** Select the correct sequence of the musical instruments according to the given sequence of their associated personalities: Ustad Allah Rakha, Totaram Sharma, TH Vinayakam.

- Ans
- ☒ 1. Tabla, Ghatam, Pakhawaj
  - ☒ 2. Ghatam, Pakhawaj, Tabla
  - ☒ 3. Tabla, Pakhawaj, Ghatam
  - ☒ 4. Pakhawaj, Tabla, Ghatam

Question ID : 264330130503  
Status : Answered  
Chosen Option : 3

**Q.24** What is the name of the scheme launched in 2022 for the welfare measures of the transgender community and for persons who are engaged in the act of begging?

- Ans
- ☒ 1. SMILE
  - ☒ 2. SHINE
  - ☒ 3. SHRI
  - ☒ 4. RISE

Question ID : 264330132968  
Status : Not Answered  
Chosen Option : --



Q.25 GDP deflator = \_\_\_\_\_

- Ans ☒ 1.  $(\text{nominal GDP} \times \text{Real GDP}) \times 100$   
☒ 2.  $(\text{nominal GDP} + \text{Real GDP}) \times 100$   
☒ 3.  $(\text{nominal GDP} - \text{Real GDP}) \times 100$   
☒ 4.  $(\text{nominal GDP} / \text{Real GDP}) \times 100$

Question ID : 264330109097

Status : Answered

Chosen Option : 4

Section : Quantitative Aptitude

Q.1 If  $a^2 + b^2 + c^2 = ab + bc + ac$ , then the value of  $\frac{11a^4 + 13b^4 + 17c^4}{17a^2b^2 + 9b^2c^2 + 15c^2a^2}$  is:

- Ans ☒ 1. 1  
☒ 2. 2  
☒ 3. 11  
☒ 4. 4

Question ID : 264330126227

Status : Not Answered

Chosen Option : --

Q.2 D and E are points on the sides AB and AC, respectively, of  $\triangle ABC$  such that DE is parallel to BC and  $AD : DB = 7 : 9$ . If CD and BE intersect each other at F, then find the ratio of areas of  $\triangle DEF$  and  $\triangle CBF$ .

- Ans ☒ 1. 49 : 144  
☒ 2. 49 : 81  
☒ 3. 49 : 256  
☒ 4. 256 : 49

Question ID : 26433075538

Status : Not Answered

Chosen Option : --

Q.3 A and B are equally efficient, and each could individually complete a piece of work in 30 days, if none took any holiday. A and B started working together on this piece of work, but A took a day off after every four days of work, while B took a day off after every five days of work. If the duo had started work on 01 August 2022, on which date was the work completed?

- Ans ☒ 1. 19 August 2022  
☒ 2. 17 August 2022  
☒ 3. 16 August 2022  
☒ 4. 18 August 2022

Question ID : 264330114523

Status : Not Answered

Chosen Option : --

**Q.4** A conical tent with radius 6 units and height 8 units is to be made by canvas. How much canvas is needed to make the tent? (Rounded off to two places of decimals)

Ans  1. 188.57 units

 2. 155.87 units

 3. 166.57 units

 4. 177.55 units

Question ID : 26433081744

Status : Not Answered

Chosen Option : --

**Q.5** The smallest number added to 888 so that it is exactly divisible by 35 is:

Ans  1. 22

 2. 23

 3. 20

 4. 21

Question ID : 264330130903

Status : Answered

Chosen Option : 1

**Q.6** The square of the difference between two given natural numbers is 324, while the product of these two given numbers is 144. Find the positive difference between the squares of these two given numbers.

Ans  1. 630

 2. 540

 3. 450

 4. 360


Question ID : 264330101348


Status : Not Answered


Chosen Option : --

**Q.7** A alone can finish a work in 15 days. A works only for the first two days and last two days. The rest work is done by B and the work is completed in 20 days. In how many days A and B together can finish the work?

Ans  1.  $\frac{90}{8}$

 2.  $\frac{80}{7}$

 3.  $\frac{80}{9}$

 4.  $\frac{70}{8}$

Question ID : 264330112118

Status : Not Answered

Chosen Option : --

Q.8 The value of

$51 \div \{25 + (25 \text{ of } 12 \div 30) - (5^4 \div 5 \text{ of } 125)\}$  is:

Ans

☒ 1.  $\frac{2}{3}$

☒ 2.  $\frac{3}{2}$

☒ 3.  $-\frac{2}{3}$

☒ 4.  $-\frac{3}{2}$

Question ID : 264330143509

Status : Not Answered

Chosen Option : --

Q.9 If  $\sin(5x - 25^\circ) = \cos(5y + 25^\circ)$ , where  $5x - 25^\circ$  and  $5y + 25^\circ$  are acute angles, then the value of  $(x + y)$  is:

Ans ☒ 1.  $50^\circ$

☒ 2.  $40^\circ$

☒ 3.  $18^\circ$

☒ 4.  $16^\circ$

Question ID : 26433083079

Status : Not Answered

Chosen Option : --

Q.10 A and B can finish a work in 10 days, B and C can finish it in 12 days and C and A can finish in 6 days. In how many days A alone can finish the work?

Ans

☒ 1.  $\frac{120}{9}$

☒ 2.  $12$

☒ 3.  $\frac{120}{11}$

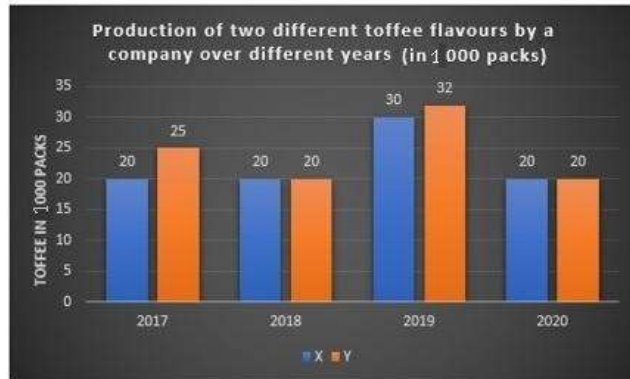
☒ 4.  $\frac{121}{12}$

Question ID : 264330112116

Status : Not Answered

Chosen Option : --

- Q.11** A toffee company prepares toffee of two different flavours X and Y. The production of two flavours over a period of 4 years is expressed in the bar graph given below.



What is the difference between the average production of flavour X in 2017 and 2018 and the average production of flavour Y in 2019 and 2020.

- Ans** ☒ 1. 6000 packs  
☒ 2. 6400 packs  
☒ 3. 7500 packs  
☒ 4. 7000 packs

Question ID : 264330130412  
 Status : Not Answered  
 Chosen Option : --

- Q.12** According to Raghav, his weight is more than 64 kg but less than 74 kg. His sister does not agree with Raghav and she thinks that his weight is more than 60 kg but less than 69 kg. His mother's view is that his weight cannot be more than 68 kg. His father's view is that his weight cannot be more than 67 kg. If all are them are correct in their estimation, then what is the average of different probable weights of Raghav measured (in kg)?

- Ans** ☒ 1. 66  
☒ 2. 67  
☒ 3. 68  
☒ 4. 65

Question ID : 264330131346  
 Status : Not Answered  
 Chosen Option : --

- Q.13** The marked price of a ceiling fan is ₹4,200 and the shopkeeper allows a discount of 5% on it. If his profit is 14%, then the cost price of the fan is:

- Ans** ☒ 1. ₹3,200  
☒ 2. ₹3,800  
☒ 3. ₹3,000  
☒ 4. ₹3,500

Question ID : 264330103717  
 Status : Answered  
 Chosen Option : 4

Q.14 Which of the following is a FALSE statement?

- Ans ☒ 1.  $\tan^2 A = 1 - \sec^2 A$
- ☐ 2.  $\sin A = \tan A \times \cos A$
- ☐ 3.  $\operatorname{cosec}^2 A - 1 = \cot^2 A$
- ☐ 4.  $\cos A \times \sec A = 1$

Question ID : 264330130047  
Status : Answered  
Chosen Option : 3

Q.15 If in  $\triangle XYZ$ ,  $XY = 4$  and  $XZ = 5$  cm, and Q is a point on YZ such that XQ bisects  $\angle X$ , then YQ : QZ is:

- Ans ☐ 1. 2 : 3
- ☐ 2. 3 : 2
- ☐ 3. 5 : 4
- ☒ 4. 4 : 5

Question ID : 26433083003  
Status : Not Answered  
Chosen Option : --

Q.16 A train traveling at 70 km/h crosses another train traveling in the same direction at 34 km/h in 25 seconds. What is the combined length of both the trains (in metres)?

- Ans ☐ 1. 225
- ☒ 2. 250
- ☐ 3. 325
- ☐ 4. 500

Question ID : 264330126586  
Status : Not Answered  
Chosen Option : --

Q.17 In a constituency, 85% of the total number of people on the electoral roll cast their votes during an election. 10% of the votes cast were declared invalid. If there were 3,00,000 people on the electoral roll, and Dharam secured 1,37,700 valid votes, what percentage of the total number of valid votes did Dharam secure?

- Ans ☐ 1. 50.5%
- ☐ 2. 70.2%
- ☐ 3. 45.9%
- ☒ 4. 60.0%

Question ID : 264330103252  
Status : Not Answered  
Chosen Option : --

**Q.18** Find the value of the following expression.

$$12 (\sin^4 \theta + \cos^4 \theta) + 18 (\sin^6 \theta + \cos^6 \theta) + 78 \sin^2 \theta \cos^2 \theta$$

Ans ☒ 1. 30

☐ 2. 40

☐ 3. 10

☐ 4. 20

Question ID : 264330143552

Status : Not Answered

Chosen Option : --

**Q.19**  $\Delta PQR$  is an equilateral triangle inscribed in a circle. S is any point on the arc QR.  
Find the measure of  $\angle PSQ$ .

Ans ☐ 1.  $30^\circ$

☒ 2.  $60^\circ$

☐ 3.  $90^\circ$

☐ 4.  $45^\circ$

Question ID : 26433058431

Status : Not Answered

Chosen Option : --

**Q.20** The given table shows the percentage of marks obtained by five students in five different subjects in a school.

	English (100)	Science (150)	Mathematics (100)	Hindi (100)	Computer (100)
Hitansh	67	70	64	55	75
Akshara	75	88	95	60	75
Pihu	69	72	89	64	77
Shreya	71	66	80	68	72
Rahul	59	64	59	67	90

What is Hitansh's overall percentage (rounded up to 2 decimal places) in the examination?

Ans ☒ 1. 66.55%

☐ 2. 64.89%

☐ 3. 65.31%

☐ 4. 75.11%

Question ID : 26433082727

Status : Not Answered

Chosen Option : --

Q.21 In a 1500 m race, X beats Y by 100 m and X beats Z by 240 m. By what distance does Y beat Z in the same race?

- Ans
- ☒ 1. 160 m
  - ☒ 2. 140 m
  - ☒ 3. 150 m
  - ☒ 4. 200 m

Question ID : 264330143464  
Status : Not Answered  
Chosen Option : --

Q.22 If the cost of 120m of cloth is ₹9,600, then what will be the cost of 147 m of that cloth?

- Ans
- ☒ 1. ₹16,170
  - ☒ 2. ₹11,670
  - ☒ 3. ₹11,760
  - ☒ 4. ₹17,160

Question ID : 264330103410  
Status : Not Answered  
Chosen Option : --

Q.23 If  $(x + \frac{1}{x}) = 5$ , and  $x > 1$ , what is the value of  $(x^8 - \frac{1}{x^8})$ ?

- Ans
- ☒ 1.  $60605\sqrt{21}$
  - ☒ 2.  $60615\sqrt{21}$
  - ☒ 3.  $60705\sqrt{21}$
  - ☒ 4.  $60725\sqrt{21}$

Question ID : 264330101372  
Status : Not Answered  
Chosen Option : --

Q.24 In how many years will a sum of ₹9,500 amount to ₹11,780 at the rate of 8% per annum at simple interest?

- Ans
- ☒ 1. 3
  - ☒ 2. 2
  - ☒ 3. 4
  - ☒ 4. 5

Question ID : 264330112220  
Status : Not Answered  
Chosen Option : --

**Q.25** By selling a watch for ₹2,000, a shopkeeper loses 20%. How much would he gain or lose by selling it for ₹3,000?

Ans ☒ 1. 20% gain

☐ 2. 25% gain

☐ 3. 15% loss

☐ 4. 25% loss

Question ID : 26433091536

Status : Not Answered

Chosen Option : --

Section : English Comprehension

**Q.1** The following sentence has been divided into three segments, A, B, C. One of them may contain a grammatical error. Select the segment that contains the error, from the given options. If you don't find any error, mark 'No error' as your answer.

Aniket lives (A) / in the small apartment (B) / in the suburbs (C).

Ans ☐ 1. C

☐ 2. No error

☒ 3. B

☐ 4. A

Question ID : 26433074027

Status : Answered

Chosen Option : 1

**Q.2** Select the most appropriate synonym for the highlighted word.  
The government's utilitarian stance was appreciated by all.

Ans ☐ 1. thrust

☐ 2. fanciful

☒ 3. useful

☐ 4. distasteful

Question ID : 264330120718

Status : Answered

Chosen Option : 3

**Q.3** Describe how you will tell everyone that Mr. Akhil opened the gate in passive voice.

Ans ☒ 1. The gate was opened by Mr.Akhil.

☐ 2. Mr.Akhil open the gate.

☐ 3. The gate been open by Mr.Akhil.

☐ 4. The gate opened by Mr.Akhil.

Question ID : 264330122772

Status : Answered

Chosen Option : 1



**Q.4 Select the INCORRECTLY spelt word.**

Ans ☒ 1. Aristocrate

☒ 2. Advertise

☒ 3. Occurrence

☒ 4. Preference

Question ID : 26433089085

Status : Answered

Chosen Option : 3

**Q.5 Select the most appropriate option that can substitute the underlined segment in the given sentence.**

I have not seen you for last year.

Ans ☒ 1. you since last year

☒ 2. me for last year

☒ 3. you about last year

☒ 4. you for last years

Question ID : 26433084625

Status : Answered

Chosen Option : 1

**Q.6 Select the INCORRECTLY spelt word in the given sentence.**

It is wierd to overreact on the consequences like this, it didn't even matter at the end of the day.

Ans ☒ 1. Matter

☒ 2. Overreact

☒ 3. Wierd

☒ 4. Consequences

Question ID : 26433096201

Status : Answered

Chosen Option : 3

**Q.7 Select the most appropriate option to substitute the underlined segment in the given sentence.**

I don't wear the sunglasses at the moment.

Ans ☒ 1. I didn't wear

☒ 2. I wore

☒ 3. I was wearing

☒ 4. I'm not wearing

Question ID : 26433099061

Status : Answered

Chosen Option : 3

**Q.8** Select the option that can be used as a one-word substitute for the given group of words.

A person who draws or produces maps

- Ans ☒ 1. Calligrapher  
☒ 2. Choreographer  
☒ 3. Chauffeur  
☒ 4. Cartographer

Question ID : 26433073678  
Status : Answered  
Chosen Option : 1

**Q.9** Select the most appropriate option that can substitute the underlined segment in the given sentence.

Her hopes for building her own house were beaten when she lost her jewellery box.

- Ans ☒ 1. house were defeated when  
☒ 2. house were frustrated when  
☒ 3. house were relieved when  
☒ 4. house were dashed when

Question ID : 26433084630  
Status : Answered  
Chosen Option : 3

**Q.10** Select the most appropriate synonym of the underlined word.

The outcome document of the Rio+20 Conference, the Future We Want, underscores climate change as “an inevitable and urgent global challenge with long-term implications for the sustainable development of all countries”. Through the document, Member States express their concern about the continuous rising of emissions of greenhouse gases and the vulnerability of all countries, particularly developing countries, to the adverse impacts of climate change.

- Ans ☒ 1. immemorable  
☒ 2. undeniable  
☒ 3. adventurous  
☒ 4. escapable

Question ID : 26433090780  
Status : Answered  
Chosen Option : 2

**Q.11** Select the option that can be used as a one-word substitute for the given group of words.

Being careful that every detail of something is correct

- Ans ☒ 1. Fastidious  
☒ 2. Squeamish  
☒ 3. Stubborn  
☒ 4. Impregnable

Question ID : 26433088192  
Status : Answered  
Chosen Option : 3

**Q.12** Select the most appropriate meaning of the given idiom.

Through thick and thin

- Ans ☒ 1. Only assist during good times  
☒ 2. Hope during trying times  
☒ 3. In good times and in bad times  
☒ 4. Weak and lonely

Question ID : 26433088776

Status : Answered

Chosen Option : 4

**Q.13** Select the most appropriate synonym of the underlined word.

The committee wanted us to explain this in detail.

- Ans ☒ 1. Elaborate  
☒ 2. Trouble  
☒ 3. Collect  
☒ 4. Keen

Question ID : 26433094732

Status : Answered

Chosen Option : 1

**Q.14** Sentences of a paragraph are given below in jumbled order. Arrange the sentences in the correct order to form a meaningful and coherent paragraph.

A. But, while the court's action solved one problem, it created another and because of the closure, many workers lost their jobs.

B. For instance, the courts directed industries in residential areas in Delhi to close down or shift out of the city.

C. In recent years, while the courts have come out with strong orders on environmental issues, these have sometimes affected people's livelihoods adversely.

D. Several of these industries were polluting the neighbourhood and discharge from these industries were polluting the river Yamuna because they had been set up without following the rules.

- Ans ☒ 1. CBDA  
☒ 2. BDCA  
☒ 3. CDAB  
☒ 4. BCAD

Question ID : 264330143863

Status : Answered

Chosen Option : 1

**Q.15** Select the most appropriate synonym of the given word.

Consequence

- Ans ☒ 1. Outcome  
☒ 2. Origin  
☒ 3. Start  
☒ 4. Begin

Question ID : 26433092063

Status : Answered

Chosen Option : 1

**Q.16** Select the most appropriate option to fill in the blank.  
There are rows of chairs on either side of the \_\_\_\_\_.

- Ans ☒ 1. ail  
☒ 2. isle  
☒ 3. I'll  
☒ 4. aisle

Question ID : 264330121279  
Status : Answered  
Chosen Option : 4

**Q.17** Select the most appropriate meaning of the given idiom.

It turns out to be a blessing in disguise.

- Ans ☒ 1. Has a good effect even though at first it seemed it would be bad  
☒ 2. When a simple solution solves a problem very well  
☒ 3. Has a very good effect on a situation or a thing  
☒ 4. When things get better and better when least expecting it

Question ID : 26433090799  
Status : Answered  
Chosen Option : 4

**Q.18** Select the most appropriate synonym of the given word.

Unbiased

- Ans ☒ 1. Organisational  
☒ 2. Objective  
☒ 3. Definitive  
☒ 4. Subjective

Question ID : 26433091815  
Status : Answered  
Chosen Option : 1

**Q.19** The following sentence has been divided into parts. One of them may contain an error.  
Select the part that contains the error from the given options. If you don't find any error, mark 'No error' as your answer.

The present-century threats to our environment, / which include interfering species, ailments, pollution and / a boiling temperature, were putting wildlife populations at peril.

- Ans ☒ 1. which include interfering species, ailments, pollution, and  
☒ 2. The present-century threats to our environment  
☒ 3. a boiling temperature, were putting wildlife populations at peril  
☒ 4. No error

Question ID : 26433073771  
Status : Not Answered  
Chosen Option : --

**Q.20** Describe how you will tell your friends that Mr. Ram uses multimedia for teaching the children in passive voice.

Ans ☒ 1. Multimedia is using for teaching the children.

☒ 2. Multimedia is used by Mr. Ram for teaching the children.

☒ 3. Multimedia is used for teach the children by Mr. Ram.

☒ 4. Mr. Ram use multimedia for teaching the children.

Question ID : 264330122769

Status : Answered

Chosen Option : 2

**Comprehension:**

In the following passage, some words have been deleted. Read the passage carefully and select the most appropriate option to fill in each blank.

Socrates is flying. No, he is (1) \_\_\_\_\_. The wings behind him beat in a calming rhythm (2) \_\_\_\_\_ the cool air rushes past. His wings are all that matter, (3) \_\_\_\_\_ at the rushing wind like the sails of some great sea vessel, the feathery appendages all he is and all he will ever want to be. His back muscles flex with the (4) \_\_\_\_\_ that takes him high above the ground. He feels the effort, of course, but sweeping into the sky does not require much of one. The (5) \_\_\_\_\_ is pleasurable, even exhilarating. With flight there is freedom beyond description, an ecstasy bordering on emotional.

**SubQuestion No : 21**

**Q.21** Select the most appropriate option to fill in blank no. 1.

Ans ☒ 1. soaring

☒ 2. sluggish

☒ 3. pertinent

☒ 4. redundant

Question ID : 264330136467

Status : Not Answered

Chosen Option : --

**Comprehension:**

In the following passage, some words have been deleted. Read the passage carefully and select the most appropriate option to fill in each blank.

Socrates is flying. No, he is (1) \_\_\_\_\_. The wings behind him beat in a calming rhythm (2) \_\_\_\_\_ the cool air rushes past. His wings are all that matter, (3) \_\_\_\_\_ at the rushing wind like the sails of some great sea vessel, the feathery appendages all he is and all he will ever want to be. His back muscles flex with the (4) \_\_\_\_\_ that takes him high above the ground. He feels the effort, of course, but sweeping into the sky does not require much of one. The (5) \_\_\_\_\_ is pleasurable, even exhilarating. With flight there is freedom beyond description, an ecstasy bordering on emotional.

**SubQuestion No : 22**

**Q.22** Select the most appropriate option to fill in blank no. 2.

Ans ☒ 1. unless

☒ 2. much

☒ 3. since

☒ 4. while

Question ID : 264330136468

Status : Not Answered

Chosen Option : --

**Comprehension:**

In the following passage, some words have been deleted. Read the passage carefully and select the most appropriate option to fill in each blank.

Socrates is flying. No, he is (1) \_\_\_\_\_. The wings behind him beat in a calming rhythm (2) \_\_\_\_\_ the cool air rushes past. His wings are all that matter, (3) \_\_\_\_\_ at the rushing wind like the sails of some great sea vessel, the feathery appendages all he is and all he will ever want to be. His back muscles flex with the (4) \_\_\_\_\_ that takes him high above the ground. He feels the effort, of course, but sweeping into the sky does not require much of one. The (5) \_\_\_\_\_ is pleasurable, even exhilarating. With flight there is freedom beyond description, an ecstasy bordering on emotional.

**SubQuestion No : 23**

**Q.23 Select the most appropriate option to fill in blank no. 3.**

- Ans ☒ 1. losing  
☒ 2. snapping  
☒ 3. cleaning  
☒ 4. limiting

Question ID : 264330136469

Status : Not Answered

Chosen Option : --

**Comprehension:**

In the following passage, some words have been deleted. Read the passage carefully and select the most appropriate option to fill in each blank.

Socrates is flying. No, he is (1) \_\_\_\_\_. The wings behind him beat in a calming rhythm (2) \_\_\_\_\_ the cool air rushes past. His wings are all that matter, (3) \_\_\_\_\_ at the rushing wind like the sails of some great sea vessel, the feathery appendages all he is and all he will ever want to be. His back muscles flex with the (4) \_\_\_\_\_ that takes him high above the ground. He feels the effort, of course, but sweeping into the sky does not require much of one. The (5) \_\_\_\_\_ is pleasurable, even exhilarating. With flight there is freedom beyond description, an ecstasy bordering on emotional.

**SubQuestion No : 24**

**Q.24 Select the most appropriate option to fill in blank no. 4.**

- Ans ☒ 1. affection  
☒ 2. effort  
☒ 3. manipulation  
☒ 4. litigation

Question ID : 264330136470

Status : Not Answered

Chosen Option : --

**Comprehension:**

In the following passage, some words have been deleted. Read the passage carefully and select the most appropriate option to fill in each blank.

Socrates is flying. No, he is (1) \_\_\_\_\_. The wings behind him beat in a calming rhythm (2) \_\_\_\_\_ the cool air rushes past. His wings are all that matter, (3) \_\_\_\_\_ at the rushing wind like the sails of some great sea vessel, the feathery appendages all he is and all he will ever want to be. His back muscles flex with the (4) \_\_\_\_\_ that takes him high above the ground. He feels the effort, of course, but sweeping into the sky does not require much of one. The (5) \_\_\_\_\_ is pleasurable, even exhilarating. With flight there is freedom beyond description, an ecstasy bordering on emotional.

**SubQuestion No : 25**

**Q.25** Select the most appropriate option to fill in blank no. 5.

Ans  1. sensation

 2. indignation

 3. lamination

 4. perversion

Question ID : 264330136471

Status : Not Answered

Chosen Option : --

## Combined Graduate level Examination 2023 Tier I

Roll Number	
Candidate Name	
Venue Name	ION Digital Zone iDZ Kuberpur
Exam Date	18/07/2023
Exam Time	5:15 PM - 6:15 PM
Subject	Combined Graduate Level Examination Tier I 2023

Section : General Intelligence and Reasoning

**Q.1** Select the option that is related to the fifth letter-cluster in the same way as the second letter-cluster is related to the first letter-cluster and the fourth letter-cluster is related to the third letter-cluster.

TABLE : FNEEY :: CROWN : OYRVH :: BEAUTY : ?

Ans ☒ 1. YTUEJH

☒ 2. YTUAEB

☒ 3. ZVXEJH

☒ 4. ZUVBFC

Question ID : 26433090019

Status : Answered

Chosen Option : 3

**Q.2** Which of the following numbers will replace the question mark (?) in the given series?  
11, ?, 20, 29, 41, 56

Ans ☒ 1. 16

☒ 2. 13

☒ 3. 15

☒ 4. 14

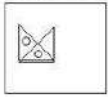
Question ID : 26433090932

Status : Answered

Chosen Option : 4

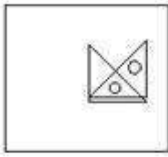


**Q.3** Select the correct mirror image of the given figure when the mirror is placed at the right side of the figure.

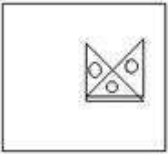


**Ans**

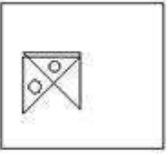
✓ 1.



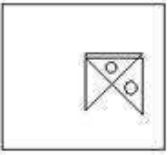
✗ 2.



✗ 3.



✗ 4.



Question ID : 26433068184

Status : Answered

Chosen Option : 1

**Q.4** The second number in the given number-pairs is obtained by performing certain mathematical operation(s) on the first number. The same operation(s) is/are followed in all the number-pairs except one. Find that odd number-pair.

**Ans** ✗ 1. 7 : 46

✗ 2. 13 : 166

✗ 3. 9 : 78

✓ 4. 48 : 144

Question ID : 264330143707

Status : Answered

Chosen Option : 4

**Q.5** Priya pointed towards a man and said that he is her brother's paternal grandmother's only child. How is the man related to Priya?

**Ans** ✗ 1. Brother

✗ 2. Paternal grandfather

✓ 3. Father

✗ 4. Son

Question ID : 264330118658

Status : Answered

Chosen Option : 1

**Q.6** Which of the following letter-clusters can replace the question mark (?) in the given series to make it logically complete?  
MIT, JEQ, GAN, DWK, ?

- Ans ☒ 1. ASH  
☐ 2. YRG  
☐ 3. ZRI  
☐ 4. YSJ

Question ID : 26433082556  
Status : Answered  
Chosen Option : 1

**Q.7** In a certain code language, "LAMP" is written as "66" and "OATS" is written as "53".  
How will "YESS" be written in that language?

- Ans ☐ 1. 51  
☐ 2. 55  
☐ 3. 45  
☒ 4. 40

Question ID : 264330130330  
Status : Answered  
Chosen Option : 4

**Q.8** In a certain code language, 'THIN' is coded as '1723' and 'WITH' is coded as '2417'.  
What is the code for 'W' in the given code language?

- Ans ☒ 1. 4  
☐ 2. 1  
☐ 3. 7  
☐ 4. 2

Question ID : 264330126009  
Status : Answered  
Chosen Option : 1

Q.9 Select the figure from the options that can replace the question mark (?) and complete the given pattern.

T	3	O	3	
P O Δ Δ T P P Δ T T O P				?
3	O	3	Δ	

Ans

✓ 1.

Δ
P T O
3

✗ 2.

Δ
P 3 T
O

✗ 3.

Δ
O P T
3

✗ 4.

Δ
P O T
3

Question ID : 26433085788  
Status : Marked For Review  
Chosen Option : 1

**Q.10** Select the option that is related to the fifth number in the same way as the second number is related to the first number and the fourth number is related to the third number.

9 : 79 :: 11 : 119 :: 7 : ?

- Ans ☒ 1. 41  
☒ 2. 49  
☒ 3. 47  
☒ 4. 51

Question ID : 264330143715

Status : Answered

Chosen Option : 3

**Q.11** Select the option that represents the correct order of the given words as they would appear in an English dictionary.

1. Banished
2. Bandage
3. Bannister
4. Bankrupt
5. Bandwagon
6. Banquet

- Ans ☒ 1. 2, 5, 1, 3, 4, 6  
☒ 2. 5, 2, 1, 4, 3, 6  
☒ 3. 2, 5, 1, 4, 3, 6  
☒ 4. 2, 5, 4, 1, 3, 6

Question ID : 264330134284

Status : Answered

Chosen Option : 3

**Q.12** Three statements are given followed by three conclusions numbered I, II and III. Assuming the statements to be true, even if they seem to be at variance with commonly known facts, decide which of the conclusions logically follow(s) from the statements.

**Statements:**

All pencils are colours.

All colours are paints.

Some paints are drawings.

**Conclusions:**

I. Some pencils are drawings.

II. Some paints are colours.

III. Some colours are pencils.

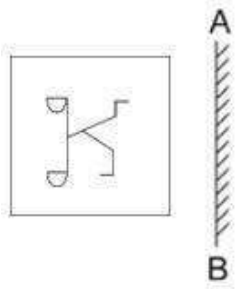
- Ans ☒ 1. Only conclusions I and III follow  
☒ 2. Only conclusions II and III follow  
☒ 3. Only conclusions I and II follow  
☒ 4. All conclusions follow

Question ID : 26433090922

Status : Answered

Chosen Option : 2

Q.13 Select the correct mirror image of the given figure when the mirror is placed at AB.

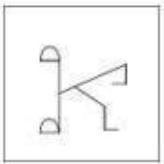


Ans

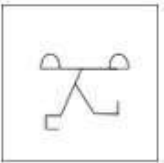
✗ 1.



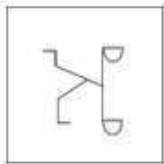
✗ 2.



✗ 3.



✓ 4.



Question ID : 264330106443

Status : Answered

Chosen Option : 4

Q.14 Select the option that represents the letters that, when placed from left to right in the following blanks, will complete the letter-series.

Z X C \_ B Z \_ \_ V B \_ X E V \_ Z \_ \_ V B

Ans ✗ 1. U Y E Z B X F

✗ 2. U X D Z B X F

✗ 3. V Y E Z B X G

✓ 4. V X D Z B X F

Question ID : 264330143747

Status : Answered

Chosen Option : 4

Q.15 Select the correct mirror image of the given figure when the mirror is placed at MN as shown below.



- Ans
- ✓ 1. 2970VpJ7
  - ✗ 2. 2e70VpJ7
  - ✗ 3. 2970VpL7
  - ✗ 4. 2970VpJ7

Question ID : 264330103140

Status : Answered

Chosen Option : 1

Q.16 Select the correct combination of mathematical signs to sequentially fill in the circles and to balance the given equation.

$$45 \bigcirc 9 \bigcirc 3 \bigcirc 25 \bigcirc 55 \bigcirc 15$$

- Ans
- ✗ 1.  $\div, \times, -, =, \times$
  - ✗ 2.  $\div, \times, =, +, +$
  - ✗ 3.  $+, =, +, \times, +$
  - ✓ 4.  $\div, \times, +, =, -$

Question ID : 264330104007

Status : Answered

Chosen Option : 4

Q.17 Select the figure that will replace the question mark (?) in the following figure series.

T B □ D	D L B △	L D △ B	B 6 D T	
O L A 6	6 S □ O	O 6 S □	□ A △ O	?
3 S 9 △	T 9 A 3	3 A 9 T	L 9 S 3	

Ans

✗ 1.

3 B 6 D
T □ A △
O L 9 S

✗ 2.

T B 6 D
O □ A △
3 L 9 S

✗ 3.

6 B T D
O □ A △
9 L 3 S

✓ 4.

6 B T D
O □ A △
3 S 9 L

Question ID : 264330143833

Status : Answered

Chosen Option : 2

Q.18 Which two numbers and two signs should be interchanged in the following equation to make it correct?

$$18 - 6 + 11 \times 5 + 18 = 113$$

Ans ✗ 1. 6 and 5, + and ×

✗ 2. 18 and 5, + and ×

✓ 3. 6 and 5, - and ×

✗ 4. 18 and 5, - and ×

Question ID : 26433097215

Status : Answered

Chosen Option : 3


**Q.19** Select the option that is related to the fifth term in the same way as the second term is related to the first term and the fourth term is related to the third term.  
 $121 : 10 :: 256 : 15 :: 441 : ?$

- Ans  1. 17  
 2. 20  
 3. 21  
 4. 19

Question ID : 26433082873  
Status : Answered  
Chosen Option : 2

**Q.20** Select the set in which the numbers are related in the same way as are the numbers of the following sets.  
(NOTE: Operations should be performed on the whole numbers, without breaking down the numbers into its constituent digits. For e.g. 13 – Operations on 13 such as adding/subtracting/multiplying etc. to 13 can be performed. Breaking down 13 into 1 and 3 and then performing mathematical operations on 1 and 3 is not allowed.)

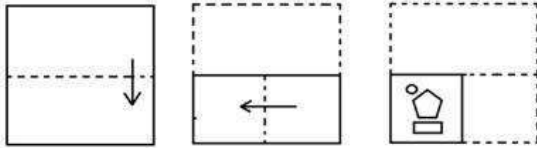
(168, 35, 143)  
(182, 65, 127)

- Ans  1. (142, 83, 69)  
 2. (253, 99, 154)  
 3. (203, 89, 117)  
 4. (159, 62, 87)

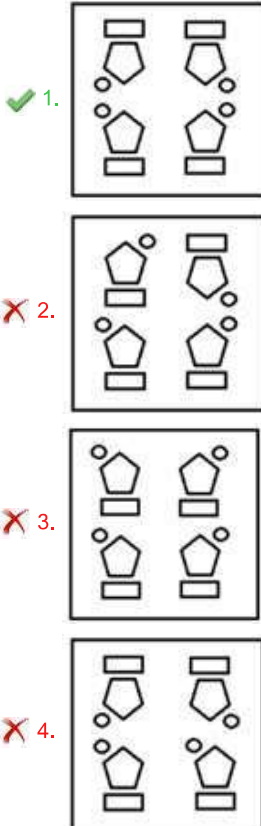
Question ID : 264330131292  
Status : Answered  
Chosen Option : 1



**Q.21** The sequence of folding a piece of paper and the manner in which the folded paper has been cut is shown below. Choose the figure that would most closely resemble the unfolded form of the paper.



Ans



Question ID : 26433067446

Status : Answered

Chosen Option : 1

**Q.22** Select the option that is related to the fifth letter-cluster in the same way as the second letter-cluster is related to the first letter-cluster and the fourth letter-cluster is related to the third letter-cluster.

BETTER : EBTRE :: ANSWER : NAWSRE :: ACCEPT : ?

- Ans
- ☒ 1. CAECPT
  - ☒ 2. CAECTP
  - ☒ 3. CACPET
  - ☒ 4. CACETP

Question ID : 26433086975

Status : Answered

Chosen Option : 2

**Q.23** Three Statements are given followed by Three conclusions numbered I, II and III.  
Assuming the statements to be true, even if they seem to be at variance with commonly known facts, decide which of the conclusions logically follow(s) from the statements.

**Statements:**

Some sweets are chocolates.  
All chocolates are cookies.  
Some cookies are healthy.

**Conclusions:**

I. Some sweets are cookies.  
II. Some cookies are chocolates.  
III. Some chocolates are sweets .

- Ans** ☒ 1. Both conclusions II and III follow.  
☒ 2. Both conclusions I and III follow.  
☒ 3. Both conclusions I and II follow.  
☒ 4. All conclusions follow.

Question ID : 26433083096

Status : Answered

Chosen Option : 4

**Q.24** Select the option that is related to the fifth letter-cluster in the same way as the second letter-cluster is related to the first letter-cluster and the fourth letter-cluster is related to the third letter-cluster.

PARROT : PTRKOM :: RECIPE : RXCBPX : RELISH : ?

- Ans** ☒ 1. HJUIOK  
☒ 2. LACXIO  
☒ 3. RXLBSA  
☒ 4. TFSDBM

Question ID : 26433069027

Status : Answered

Chosen Option : 3

**Q.25** Select the set in which the numbers are related in the same way as are the numbers of the given set.

(NOTE: Operations should be performed on the whole numbers, without breaking down the numbers into its constituent digits. E.g. 13 – Operations on 13 such as adding /subtracting /multiplying etc. to 13 can be performed. Breaking down 13 into 1 and 3 and then performing mathematical operations on 1 and 3 is not allowed.)

(9, 26, 53)  
(8, 23, 47)

- Ans** ☒ 1. (5, 14, 29)  
☒ 2. (6, 17, 36)  
☒ 3. (11, 32, 56)  
☒ 4. (7, 20, 42)

Question ID : 26433078959

Status : Answered

Chosen Option : 1

**Q.1 In which state is the Chithirai festival celebrated?**

- Ans ☒ 1. Punjab
- ☒ 2. Tamil Nadu
- ☒ 3. Rajasthan
- ☒ 4. Meghalaya

Question ID : 264330113174  
Status : Answered  
Chosen Option : 4

**Q.2 Kalbelia dance is generally performed in which of the following states of India?**

- Ans ☒ 1. Tamil Nadu
- ☒ 2. Punjab
- ☒ 3. Rajasthan
- ☒ 4. Assam

Question ID : 26433094868  
Status : Answered  
Chosen Option : 3

**Q.3 The rule of the English East India company was ended in British India under the Government of India Act, \_\_\_\_\_.**

- Ans ☒ 1. 1858
- ☒ 2. 1857
- ☒ 3. 1859
- ☒ 4. 1856

Question ID : 264330111393  
Status : Answered  
Chosen Option : 2

**Q.4 Which of the following is a highly electropositive element that readily gives up an electron in order to obtain a stable electronic configuration?**

- Ans ☒ 1. Cl
- ☒ 2. O
- ☒ 3. Na
- ☒ 4. N

Question ID : 264330109900  
Status : Answered  
Chosen Option : 3

**Q.5 The famous scientist, Albert Einstein, was inspired by whose idea of non-violence?**

- Ans ☒ 1. Mahatma Gandhi
- ☒ 2. Vardhaman Mahavira
- ☒ 3. Gautam Buddha
- ☒ 4. BR Ambedkar

Question ID : 264330130565  
Status : Answered  
Chosen Option : 1

**Q.6 Which of the following is INCORRECTLY matched?**

- Ans ☒ 1. Montane climate - Uttar Pradesh, Bihar and Jharkhand
- ☒ 2. Tropical monsoon climate - The Western Ghats, the Malabar Coast and southern Assam
- ☒ 3. Tropical semi-arid (steppe) climate - Karnataka, central Maharashtra, some parts of Tamil Nadu and Andhra Pradesh
- ☒ 4. Hot deserts, arid climate - Rajasthan and some parts of Gujarat

Question ID : 264330109942  
Status : Not Answered  
Chosen Option : --

**Q.7 Diwan-i-Arz was essentially the department of \_\_\_\_\_ under Delhi Sultanate.**

- Ans ☒ 1. financial services
- ☒ 2. court ceremonies
- ☒ 3. military services
- ☒ 4. royal karkhanas

Question ID : 264330114080  
Status : Not Answered  
Chosen Option : --

**Q.8 What is the full form of IADP?**

- Ans ☒ 1. Intensive Agricultural District Programme
- ☒ 2. Indian Agricultural Development Programme
- ☒ 3. Integrated Agricultural District Plan
- ☒ 4. Intensive Agricultural Development Project

Question ID : 264330112482  
Status : Answered  
Chosen Option : 2

**Q.9** Who among the following has been appointed as the new Chairperson of the National Company Law Appellate Tribunal (NCLAT), for a period of four years or until he attains the age of 70 years, whichever is the earliest in November 2021?

- Ans
- ☒ 1. Justice Vikram Nath
  - ☒ 2. Justice BV Nagarathna
  - ☒ 3. Justice Ashok Bhushan
  - ☒ 4. Justice Abhay Oka

Question ID : 26433081853  
Status : Not Answered  
Chosen Option : --

**Q.10** Under which policy has the Union Ministry of Power launched a scheme for procurement of aggregate power of 4500 MW for five years?

- Ans
- ☒ 1. Urja Sanchay Policy
  - ☒ 2. Shakti Policy
  - ☒ 3. Nai Urja Policy
  - ☒ 4. Gatishakti Policy

Question ID : 264330137270  
Status : Answered  
Chosen Option : 3

**Q.11** Which element was arbitrarily assigned a value of 4.0 in the 'Halogens' section in 1922 by Linus Pauling, an American scientist?

- Ans
- ☒ 1. Fluorine
  - ☒ 2. Iodine
  - ☒ 3. Astatine
  - ☒ 4. Bromine

Question ID : 264330141695  
Status : Not Answered  
Chosen Option : --

**Q.12** The MITRA scheme was first announced in the Union Budget for 2021-22 to set up world-class infrastructure in which sector?

- Ans
- ☒ 1. Automobiles
  - ☒ 2. Textile industry
  - ☒ 3. Defence manufacturing
  - ☒ 4. Pharmaceuticals

Question ID : 264330111309  
Status : Answered  
Chosen Option : 2

**Q.13 Where in India are the Sundari trees that provide durable and hard timber found?**

- Ans ☒ 1. Tropical Deciduous Forests
- ☒ 2. Mangrove Forests
- ☒ 3. Montane Forests
- ☒ 4. Tropical Evergreen Forests

Question ID : 264330110654  
Status : Answered  
Chosen Option : 2

**Q.14 Which of the following is NOT included in domestic income?**

- Ans ☒ 1. Income earned by the residents of the country
- ☒ 2. Income earned by the non-residents outside the country
- ☒ 3. Income earned by all the employees of the country
- ☒ 4. Profit of all the industries of the country

Question ID : 26433064859  
Status : Answered  
Chosen Option : 2

**Q.15 As per National Family Health Survey (NFHS 5) 2019-21, what percentage of women have a bank or savings account that they themselves use?**

- Ans ☒ 1. 68.3%
- ☒ 2. 78.6%
- ☒ 3. 87.7%
- ☒ 4. 58.5%

Question ID : 264330137283  
Status : Not Answered  
Chosen Option : --

**Q.16 Tansen, who was included in the Navaratnas of Akbar, was an expert in playing which of the following musical instruments?**

- Ans ☒ 1. Nagada
- ☒ 2. Veena
- ☒ 3. Sarangi
- ☒ 4. Rabab

Question ID : 26433074121  
Status : Not Answered  
Chosen Option : --

Q.17 Match the following countries with respect to their ranking on the Global Hunger Index 2022 out of 121 countries.

Country	Rank
1. India	a. 99
2. Pakistan	b. 107
3. Nepal	c. 81

- Ans ☒ 1. 1-c, 2-a, 3-b  
☒ 2. 1-b, 2-c, 3-a  
☒ 3. 1-a, 2-b, 3-c  
☒ 4. 1-b, 2-a, 3-c

Question ID : 264330132764  
Status : Answered  
Chosen Option : 2

Q.18 Mitochondria is NOT found in \_\_\_\_\_.

- Ans ☒ 1. yeast  
☒ 2. bacteria  
☒ 3. algae  
☒ 4. fungi

Question ID : 26433066491  
Status : Answered  
Chosen Option : 2

Q.19 Which of the following pairs is/are correctly matched regarding the terminology used in the Parliament?

- A.Appropriation Bill — A Money Bill passed for providing for the withdrawal or appropriation from and out of the Consolidated Fund of India  
B.Demand for Grants — Earmarking of budgetary allocation for meeting only planned expenditure of a Ministry/Department  
C.Short Duration Discussion — For raising a discussion on a matter of urgent public importance for which a notice has to be given by a Member and supported by 50 Members

- Ans ☒ 1. A, B and C  
☒ 2. B and C only  
☒ 3. A only  
☒ 4. A and C only

Question ID : 264330119704  
Status : Not Answered  
Chosen Option : --

**Q.20 Sangeet Natak Akademi Award (Akademi Puraskar) for the year 2020 was awarded to Meenakshi Chitharanjan for her contribution to which of the following?**

**Ans** ☒ 1. Bharatanatyam

☐ 2. Odissi

☐ 3. Manipuri

☐ 4. Kuchipudi

Question ID : 264330130895

Status : Answered

Chosen Option : 1

**Q.21 Select the INCORRECT statement about Phylum Arthropoda.**

**Ans** ☐ 1. Class Insecta is the largest class of Phylum Arthropoda.

☒ 2. Lignin is the main component of the exoskeletons of arthropods.

☐ 3. Over 85% of all the known animal species are arthropods.

☐ 4. Phylum Arthropoda comprises a wide diversity of animals with hard exoskeletons and jointed appendages.

Question ID : 264330112812

Status : Not Answered

Chosen Option : --

**Q.22 \_\_\_\_\_ countries participated in the Tokyo Paralympic 2020.**

**Ans** ☐ 1. 163

☐ 2. 161

☐ 3. 164

☒ 4. 162

Question ID : 264330109680

Status : Answered

Chosen Option : 1

**Q.23 Who sent the Greek ambassador Megasthenes to the court of Chandragupta Maurya?**

**Ans** ☒ 1. Seleucus

☐ 2. Tolmi

☐ 3. Dionysus

☐ 4. Sikandar

Question ID : 264330114018

Status : Answered

Chosen Option : 1



**Q.24** Which of the following amendment acts included Fundamental Duties in the Constitution of India?

- Ans  1. 40<sup>nd</sup> Amendment Act  
 2. 42<sup>nd</sup> Amendment Act  
 3. 41<sup>st</sup> Amendment Act  
 4. 39<sup>th</sup> Amendment Act

Question ID : 264330110563  
Status : Answered  
Chosen Option : 2

**Q.25** Which of the following states recognise the Dahi Handi as a sports event?

- Ans  1. Maharashtra  
 2. Bihar  
 3. Madhya Pradesh  
 4. Uttar Pradesh

Question ID : 264330109718  
Status : Answered  
Chosen Option : 4

Section : Quantitative Aptitude

**Q.1** Simplify the following expression.

$$[\sqrt{25} + 12 \div 3 - \{20 + (16 \text{ of } 8 \div 16) - (54 \div 18 \text{ of } \frac{1}{2})\}]$$

- Ans  1. -13  
 2. 12  
 3. 22  
 4. 0

Question ID : 26433063186  
Status : Answered  
Chosen Option : 1

**Q.2** If  $a + b + c = 6$  and  $a^2 + b^2 + c^2 = 14$ , then what is the value of  $(a - b)^2 + (b - c)^2 + (c - a)^2$ ?

- Ans  1. -8  
 2. 8  
 3. 10  
 4. 6

Question ID : 264330131362  
Status : Answered  
Chosen Option : 4

**Q.3** An amount becomes double in 8 years on simple interest. In how many years would Rs.25,000 become Rs.1,00,000 with the same rate of interest?

- Ans
- ☒ 1. 32
  - ☒ 2. 28
  - ☒ 3. 16
  - ☒ 4. 24

Question ID : 264330106094

Status : Answered

Chosen Option : 4

**Q.4** The marked price on a book is ₹1,000. In a book fair, it is available for sale with a discount scheme offering two successive discounts of 12% and 8%. What is the final selling price (in ₹) of the book for a customer (rounded off to the nearest integer)?

- Ans
- ☒ 1. 810
  - ☒ 2. 790
  - ☒ 3. 825
  - ☒ 4. 800

Question ID : 264330103964

Status : Answered

Chosen Option : 1

**Q.5** A and B invested money in a business in the ratio of 7 : 5. If 15% of the total profit goes for charity, and A's share in the profit is Rs.5,950, then what is the total profit?

- Ans
- ☒ 1. Rs.12,500
  - ☒ 2. Rs.12,000
  - ☒ 3. Rs.10,500
  - ☒ 4. Rs.11,750

Question ID : 26433082369

Status : Answered

Chosen Option : 2

**Q.6** A shopkeeper purchases six small cold drink bottles for ₹100. For how much should he sell one such bottle to get a profit of 20%?

- Ans
- ☒ 1. ₹22
  - ☒ 2. ₹20
  - ☒ 3. ₹21
  - ☒ 4. ₹23

Question ID : 26433091538

Status : Answered

Chosen Option : 2

Q.7 Find the value of the given expression.

$$\frac{4}{3} \tan^2 45^\circ + 3 \cos^2 30^\circ - 2 \sec^2 30^\circ - \frac{3}{4} \cot^2 60^\circ$$

Ans

✓ 1.  $\frac{2}{3}$

✗ 2.  $\frac{3}{2}$

✗ 3.  $\frac{\sqrt{2}}{3}$

✗ 4.  $\frac{3}{\sqrt{2}}$

Question ID : 264330126615

Status : Answered

Chosen Option : 1

Q.8 Meenu is 38 years old. Her daughter is 8 years old. In how many years will Meenu be double her daughter's age?

Ans ✓ 1. 22

✗ 2. 25

✗ 3. 20

✗ 4. 24

Question ID : 264330145546

Status : Answered

Chosen Option : 1

Q.9 Shatabdi Express train covers 700 km in 5 hours and another 1012 km in 11 hours. What is the average speed of the train (in metres/second)?

Ans ✗ 1. 107

✗ 2.  $385\frac{1}{5}$

✓ 3.  $29\frac{13}{18}$

✗ 4. 27

Question ID : 264330123986

Status : Answered

Chosen Option : 3

Q.10 In a company, a piece of work can be completed in 4, 6 and 18 days alone by R, S and T, respectively. In how many days will the work be completed if they work together? (Rounded off to 2 decimal places)

- Ans ☒ 1. 3.32  
☒ 2. 2.12  
☒ 3. 2.42  
☒ 4. 3.21

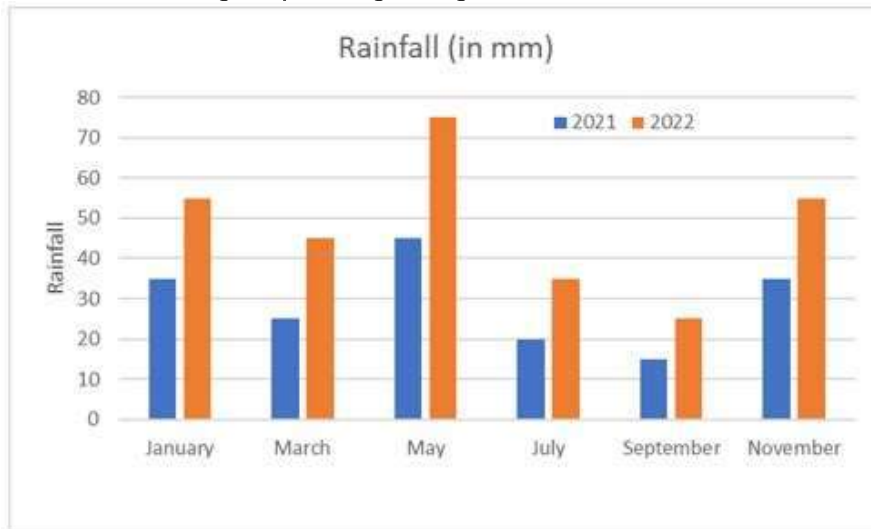
Question ID : 264330112233  
 Status : Answered  
 Chosen Option : 2

Q.11 In a  $\triangle ABC$ , if  $\angle A = 90^\circ$ ,  $AC = 5$  cm,  $BC = 9$  cm and in  $\triangle PQR$ ,  $\angle P = 90^\circ$ ,  $PR = 3$  cm,  $QR = 8$  cm, then:

- Ans ☒ 1.  $\triangle ABC \cong \triangle PQR$   
☒ 2.  $\triangle ABC \not\cong \triangle PQR$   
☒ 3.  $\triangle ABC \neq \triangle PQR$   
☒ 4.  $\triangle ABC = \triangle PQR$

Question ID : 264330126216  
 Status : Answered  
 Chosen Option : 2

Q.12 The following diagram shows the rainfall over two years. Which of the following months shows the highest percentage change in rainfall?



- Ans ☒ 1. January  
☒ 2. September  
☒ 3. May  
☒ 4. March

Question ID : 264330130030  
 Status : Answered  
 Chosen Option : 3

Q.13

If  $p = \frac{\sqrt{2}+1}{\sqrt{2}-1}$  and  $q = \frac{\sqrt{2}-1}{\sqrt{2}+1}$  then find the value of  $\frac{p^2}{q} + \frac{q^2}{p}$ .

Ans ☒ 1. 200

☒ 2. 196

☒ 3. 198

☒ 4. 188

Question ID : 26433080389

Status : Answered

Chosen Option : 3

Q.14 Find the exact value of  $\cos 120^\circ$ .

Ans ☒ 1. -0.5

☒ 2. 0

☒ 3. 0.5

☒ 4. 1

Question ID : 264330143579

Status : Answered

Chosen Option : 1

Q.15 A cone and a cylinder with equal radii have equal volumes. The ratio of their heights is :

Ans ☒ 1. 2 : 3

☒ 2. 3 : 4

☒ 3. 1 : 2

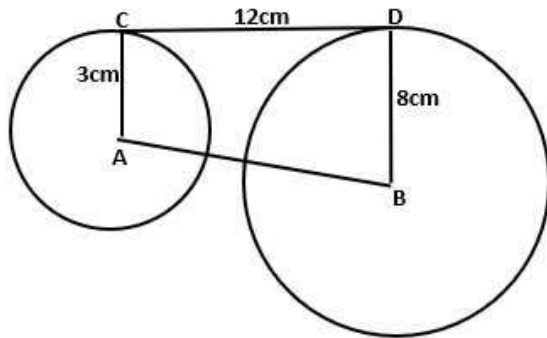
☒ 4. 3 : 1

Question ID : 26433081747

Status : Answered

Chosen Option : 4

Q.16 Observe the given figure. The distance between the two centers AB is



- Ans
- ☒ 1. 10 cm
  - ☒ 2. 11 cm
  - ☒ 3. 13 cm
  - ☒ 4. 12 cm

Question ID : 264330106650  
Status : Answered  
Chosen Option : 3

Q.17 Quantity of various food items used by a restaurant during 4 months of a year (in kg).

Month Food Item	March	April	May	June
A	220	180	270	320
B	255	320	390	420
C	280	295	280	315
D	350	310	250	280
E	308	340	350	365

What is the average quantity of food item C used during all the 4 months together?

- Ans
- ☒ 1. 303.7 kg
  - ☒ 2. 292.5 kg
  - ☒ 3. 211.8 kg
  - ☒ 4. 253.6 kg

Question ID : 26433099056  
Status : Answered  
Chosen Option : 2

Q.18 Find the fourth proportional of 144, 192 and 216.

- Ans
- ☒ 1. 361
  - ☒ 2. 288
  - ☒ 3. 324
  - ☒ 4. 289

Question ID : 264330103412  
Status : Answered  
Chosen Option : 2

Q.19

Simplify the following expression.

$$\frac{7}{10} \div \frac{3}{7} \text{ of } (2\frac{3}{10} + 2\frac{3}{5}) + \frac{1}{5} \div 1\frac{2}{5} - \frac{2}{7}$$

Ans

☐ 1.  $-\frac{4}{21}$

☐ 2.  $\frac{5}{21}$

☒ 3.  $\frac{4}{21}$

☐ 4.  $-\frac{5}{21}$

Question ID : 264330143486

Status : Answered

Chosen Option : 3

Q.20

Using  $\tan(A - B) = \frac{\tan A - \tan B}{1 + \tan A \tan B}$ , find the value of  $\tan 15^\circ$ .

Ans

☐ 1.  $\sqrt{3} + 1$

☐ 2.  $\sqrt{3} - 1$

☒ 3.  $2 - \sqrt{3}$

☐ 4.  $2 + \sqrt{3}$

Question ID : 264330143531

Status : Answered

Chosen Option : 3

Q.21 Suresh and Anil are working on a special project. Suresh takes 5 hours to type 40 pages and Anil needs 6 hours to type 32 pages on a computer. How much time will it take them to type a 110-page assignment if they work on two different computers?

Ans

☒ 1. 8 hours 15 minutes

☐ 2. 8 hours

☐ 3. 7 hours 35 minutes

☐ 4. 8 hours 40 minutes

Question ID : 264330143468

Status : Answered

Chosen Option : 1

**Q.22** A thief is spotted by a policeman from a distance of 210 m. When the policeman starts the chase, the thief also starts running. If the speed of the thief is 25 km/h and that of the policeman is 32 km/h, then how far would the thief have run (in m) before he is overtaken?

- Ans
- ☐ 1. 920
  - ☐ 2. 480
  - ☐ 3. 1200
  - ☒ 4. 750

Question ID : 264330102370

Status : Answered

Chosen Option : 4

**Q.23** Sudhin cycled at 8.5 km/h for 4 hours, then took an auto and travelled at 20 km/h for 1.5 hours, and then walked at 4 km/h for y hours. If Sudhin's overall average speed for the entire journey was 10 km/h, what is the value of y?

- Ans
- ☐ 1. 2
  - ☐ 2. 1.25
  - ☒ 3. 1.5
  - ☐ 4. 1.75

Question ID : 264330103241

Status : Answered

Chosen Option : 3

**Q.24** Area of a sector is  $1848 \text{ m}^2$  and the central angle of the sector is  $270^\circ$ . Find the radius of the circle. (Take  $\pi=22/7$ )

- Ans
- ☐ 1. 784 m
  - ☐ 2. 22 m
  - ☐ 3. 27 m
  - ☒ 4. 28 m

Question ID : 264330143591

Status : Answered

Chosen Option : 4

**Q.25** A man and a woman can finish a work together in half the time taken by a woman and a boy together. A boy can finish the work alone in 20 days and 2 women together can finish it in 30 days. In how many days will the work be finished by 4 men?

- Ans
- ☐ 1. 2
  - ☒ 2. 2.14
  - ☐ 3. 2.5
  - ☐ 4. 3

Question ID : 264330117932

Status : Answered

Chosen Option : 3



**Q.1** Select the most appropriate meaning of the underlined idiom.

Has he lost his mind? He is falling foul of everybody.

- Ans
- ☐ 1. Quite puzzled with
  - ☐ 2. Maintaining a sort of coldness
  - ☐ 3. Having an amicable talk with
  - ☒ 4. Quarrelling with

Question ID : 26433089102  
Status : Answered  
Chosen Option : 4

**Q.2** Select the most appropriate synonym of the underlined word.

In the 2030 Agenda for Sustainable Development, Member States express their commitment to protect the planet from degradation and take urgent action on climate change.

- Ans
- ☐ 1. pollution
  - ☐ 2. hazard
  - ☒ 3. degeneration
  - ☐ 4. approval

Question ID : 26433090778  
Status : Answered  
Chosen Option : 1

**Q.3** The following sentence has been split into four segments. Identify the segment that contains a grammatical error.

My mother said / that Ben will done / the assignment / today.

- Ans
- ☐ 1. today
  - ☐ 2. My mother said
  - ☒ 3. that Ben will done
  - ☐ 4. the assignment

Question ID : 26433086448  
Status : Answered  
Chosen Option : 2

**Q.4** Select the most appropriate option that can substitute the underlined segment in the given sentence.

Irene went to office every single day by walk.

- Ans
- ☐ 1. every day single by walk
  - ☐ 2. every single day walk
  - ☒ 3. every single day on foot
  - ☐ 4. every single day on walk

Question ID : 26433088746  
Status : Answered  
Chosen Option : 3

**Q.5** Select the most appropriate one-word substitution of the given group of words.

Something that is absolutely necessary, that you cannot do without.

- Ans ☒ 1. Insular
- ☒ 2. Indispensable
- ☒ 3. Isolated
- ☒ 4. Intolerant

Question ID : 26433090859  
Status : Answered  
Chosen Option : 2

**Q.6** The following sentence has been divided into parts. One of them may contain an error. Select the part that contains the error from the given options. If you don't find any error, mark 'No error' as your answer.

Mr. Ram Kumar, the cashier are / on temporary withdrawal / from service.

- Ans ☒ 1. on temporary withdrawal
- ☒ 2. Mr. Ram Kumar, the cashier are
- ☒ 3. from service
- ☒ 4. No error

Question ID : 26433060152  
Status : Answered  
Chosen Option : 2

**Q.7** The given sentence has some words with incorrect spellings. Select the most appropriate option that corrects the spellings.

The agreement was terminated by mutal consent.

- Ans ☒ 1. The agreement was terminated by mutual consent.
- ☒ 2. The agreement was tarminated by mutual consent.
- ☒ 3. The agriment was terminated by mutual consent.
- ☒ 4. The agreement was terminated by mutual concent.

Question ID : 26433092087  
Status : Answered  
Chosen Option : 1

**Q.8** Select the option that can be used as a one-word substitute for the given group of words.

Animal living both on land and water.

- Ans ☒ 1. Marine
- ☒ 2. Amphibian
- ☒ 3. Arboreal
- ☒ 4. Terrestrial

Question ID : 26433084673  
Status : Answered  
Chosen Option : 2

**Q.9 Select the INCORRECTLY spelt word.**

- Ans ☒ 1. Avarise  
☐ 2. Adverse  
☐ 3. Beige  
☐ 4. Admonish

Question ID : 264330120768  
Status : Answered  
Chosen Option : 1

**Q.10 Select the most appropriate option that can substitute the underlined segment in the given sentence. If there is no need to substitute it, select 'No substitution'.**  
The company decided to sell their stake in their subsidiary because it was under massive debts.

- Ans ☐ 1. sell their stake in its subsidiary  
☐ 2. No substitution  
☐ 3. sell its stake in their subsidiary  
☒ 4. sell its stake in its subsidiary

Question ID : 26433093086  
Status : Answered  
Chosen Option : 4

**Q.11 Select the most appropriate option that can substitute the underlined segment in the given sentence.**  
In times of difficulty, she preys for an oracle to guide her.

- Ans ☐ 1. pray  
☐ 2. praise  
☐ 3. price  
☒ 4. prays

Question ID : 264330117207  
Status : Answered  
Chosen Option : 4

**Q.12 Select the option that expresses the given sentence in passive voice.**  
Rahul knows Shahbaz since childhood.

- Ans ☐ 1. Shahbaz was known to Rahul since childhood.  
☒ 2. Shahbaz is known to Rahul since childhood.  
☐ 3. Shahbaz known by Rahul since childhood.  
☐ 4. Shahbaz has known Rahul since childhood.

Question ID : 264330100323  
Status : Answered  
Chosen Option : 2

Q.13 Select the most appropriate ANTONYM of the underlined word.

The love between them is blooming.

- Ans ☒ 1. Flourishing  
☒ 2. Sprouting  
☒ 3. Growing  
☒ 4. Fading

Question ID : 26433090864  
Status : Answered  
Chosen Option : 4

Q.14 Select the most appropriate ANTONYM of the underlined word.

The truck was carrying a heavy load .

- Ans ☒ 1. Big  
☒ 2. Massive  
☒ 3. Light  
☒ 4. Large

Question ID : 264330121042  
Status : Answered  
Chosen Option : 3

Q.15 Select the most appropriate meaning of the given idiom.

To be in two minds

- Ans ☒ 1. To be dominated by someone else  
☒ 2. To work on somebody else's advice  
☒ 3. To be in a critical state  
☒ 4. To be uncertain

Question ID : 26433088139  
Status : Answered  
Chosen Option : 4

Q.16 Sentences of a paragraph are given below in jumbled order. Arrange the sentences in the correct order to form a meaningful and coherent paragraph.

- A.The shopman was very interested in selling this creamy box to her as he would gain a big margin.  
B.The man on the counter showed her 'an exquisite little enamel box' with a very fine glaze as if baked in cream.  
C.As the box was too expensive, priced twenty-eight guineas, she asked the shopkeeper to keep it for her.  
D.She went inside a little antique shop in Curzon Street. This was the usual shop where the shopkeeper was ridiculously fond of serving her.

- Ans ☒ 1. DCBA  
☒ 2. ADBC  
☒ 3. BDAC  
☒ 4. DBAC

Question ID : 26433096941  
Status : Answered  
Chosen Option : 4

**Q.17** Select the most appropriate **ANTONYM** of the underlined word.

I understand your plight.

- Ans ☒ 1. Predicament  
☒ 2. Dilemma  
☒ 3. Quandary  
☒ 4. Advantage

Question ID : 26433090862  
Status : Answered  
Chosen Option : 4

**Q.18** Select the most appropriate synonym of the given word.

Certain

- Ans ☒ 1. Approval  
☒ 2. Definite  
☒ 3. Doubtful  
☒ 4. Caution

Question ID : 26433093487  
Status : Answered  
Chosen Option : 2

**Q.19** Select the most appropriate option that can substitute the underlined segment in the given sentence. If there is no need to substitute it, select 'No substitution'.

The Karaoke programme was planned by the club was a grand success.

- Ans ☒ 1. were planned by the club  
☒ 2. No substitution  
☒ 3. has been planned by the club  
☒ 4. planned by the club

Question ID : 26433073943  
Status : Answered  
Chosen Option : 4

**Q.20** Select the option that expresses the given sentence in passive voice.  
They will not water the plants.

- Ans ☒ 1. The plants will not be watered by them.  
☒ 2. The plants will not be watered by us.  
☒ 3. The plants are not be watered by them.  
☒ 4. They shall not water the plants.

Question ID : 264330121857  
Status : Answered  
Chosen Option : 1

**Comprehension:**

In the following passage, some words have been deleted. Read the passage carefully and select the most appropriate option to fill in each blank.

War is mostly glorified and (1) \_\_\_\_\_ by society. The real picture of warfare is as horrific and (2) \_\_\_\_\_ as one can imagine. Often, soldiers who witness death-like experiences suffer from psychological disorders and are (3) \_\_\_\_\_ for the rest of their lives. Many war poems contrast all the sentimental myths about warfare by (4) \_\_\_\_\_ the harsh realities that soldiers face. The real trauma is seen in people who are left to (5) \_\_\_\_\_ for their loved ones after they are gone.

**SubQuestion No : 21****Q.21 Select the most appropriate option to fill in blank number 1.**

- Ans  1. sharpened  
 2. cemented  
 3. sacrificed  
 4. eulogised

Question ID : 264330139103

Status : Answered

Chosen Option : 4

**Comprehension:**

In the following passage, some words have been deleted. Read the passage carefully and select the most appropriate option to fill in each blank.

War is mostly glorified and (1) \_\_\_\_\_ by society. The real picture of warfare is as horrific and (2) \_\_\_\_\_ as one can imagine. Often, soldiers who witness death-like experiences suffer from psychological disorders and are (3) \_\_\_\_\_ for the rest of their lives. Many war poems contrast all the sentimental myths about warfare by (4) \_\_\_\_\_ the harsh realities that soldiers face. The real trauma is seen in people who are left to (5) \_\_\_\_\_ for their loved ones after they are gone.

**SubQuestion No : 22****Q.22 Select the most appropriate option to fill in blank number 2.**

- Ans  1. lengthening  
 2. inspiring  
 3. devastating  
 4. harkening

Question ID : 264330139104

Status : Answered


Chosen Option : 3

**Comprehension:**

In the following passage, some words have been deleted. Read the passage carefully and select the most appropriate option to fill in each blank.

War is mostly glorified and (1) \_\_\_\_\_ by society. The real picture of warfare is as horrific and (2) \_\_\_\_\_ as one can imagine. Often, soldiers who witness death-like experiences suffer from psychological disorders and are (3) \_\_\_\_\_ for the rest of their lives. Many war poems contrast all the sentimental myths about warfare by (4) \_\_\_\_\_ the harsh realities that soldiers face. The real trauma is seen in people who are left to (5) \_\_\_\_\_ for their loved ones after they are gone.

**SubQuestion No : 23****Q.23 Select the most appropriate option to fill in blank number 3.**

- Ans  1. crepted  
 2. shelled  
 3. numbed  
 4. hardened

Question ID : 264330139105

Status : Answered





Chosen Option : 1

**Comprehension:**

In the following passage, some words have been deleted. Read the passage carefully and select the most appropriate option to fill in each blank.

War is mostly glorified and (1) \_\_\_\_\_ by society. The real picture of warfare is as horrific and (2) \_\_\_\_\_ as one can imagine. Often, soldiers who witness death-like experiences suffer from psychological disorders and are (3) \_\_\_\_\_ for the rest of their lives. Many war poems contrast all the sentimental myths about warfare by (4) \_\_\_\_\_ the harsh realities that soldiers face. The real trauma is seen in people who are left to (5) \_\_\_\_\_ for their loved ones after they are gone.

**SubQuestion No : 24****Q.24 Select the most appropriate option to fill in blank number 4.**

- Ans  1. exposing  
 2. hardening  
 3. giving  
 4. being

Question ID : 264330139106

Status : Answered

Chosen Option : 1


**Comprehension:**

In the following passage, some words have been deleted. Read the passage carefully and select the most appropriate option to fill in each blank.

War is mostly glorified and (1) \_\_\_\_\_ by society. The real picture of warfare is as horrific and (2) \_\_\_\_\_ as one can imagine. Often, soldiers who witness death-like experiences suffer from psychological disorders and are (3) \_\_\_\_\_ for the rest of their lives. Many war poems contrast all the sentimental myths about warfare by (4) \_\_\_\_\_ the harsh realities that soldiers face. The real trauma is seen in people who are left to (5) \_\_\_\_\_ for their loved ones after they are gone.

**SubQuestion No : 25**

**Q.25 Select the most appropriate option to fill in blank number 5.**

- Ans  1. think
-  2. memorise
-  3. mourn
-  4. resist

Question ID : 264330139107

Status : Answered

Chosen Option : 3